

# National Testing Agency

**Question Paper Name:** AGRI BUSINESS MANAGEMENT 1st July 2019 Shift2  
**Subject Name:** AGRI BUSINESS MANAGEMENT  
**Creation Date:** 2019-07-01 18:50:38  
**Duration:** 150  
**Total Marks:** 640  
**Display Marks:** Yes  
**Share Answer Key With Delivery Engine:** Yes  
**Actual Answer Key:** Yes

## AGRI BUSINESS MANAGEMENT

**Group Number :** 1  
**Group Id :** 5531723  
**Group Maximum Duration :** 0  
**Group Minimum Duration :** 150  
**Revisit allowed for view? :** No  
**Revisit allowed for edit? :** No  
**Break time:** 0  
**Group Marks:** 640

## Part A : AGRI BUSINESS MANAGEMENT

**Section Id :** 55317211  
**Section Number :** 1  
**Section type :** Online  
**Mandatory or Optional:** Mandatory  
**Number of Questions:** 118  
**Number of Questions to be attempted:** 118  
**Section Marks:** 640  
**Display Number Panel:** Yes  
**Group All Questions:** No

**Sub-Section Number:** 1  
**Sub-Section Id:** 55317211  
**Question Shuffling Allowed :** Yes

**Question Number : 1 Question Id : 553172501 Question Type : MCQ Option Shuffling : No Display Question Number : Yes Single Line Question Option : No Option Orientation : Vertical Correct Marks : 4 Wrong Marks : 1**

If  $n$  is an integer between 30 and 80, then which of the following could NOT be  $n + 7$  ?

1. 47
2. 58
3. 84
4. 88

**Options :**

- 5531722001. 1
- 5531722002. 2
- 5531722003. 3
- 5531722004. 4

**Question Number : 2 Question Id : 553172502 Question Type : MCQ Option Shuffling : No Display Question Number : Yes Single Line Question Option : No Option Orientation : Vertical**

**Correct Marks : 4 Wrong Marks : 1**

The difference between the place value of 8 and 3 in the number 528435 is

1. 400
2. 5201
3. 3030
4. 7970

**Options :**

- 5531722005. 1
- 5531722006. 2
- 5531722007. 3
- 5531722008. 4

**Question Number : 3 Question Id : 553172503 Question Type : MCQ Option Shuffling : No Display Question Number : Yes Single Line Question Option : No Option Orientation : Vertical**

**Correct Marks : 4 Wrong Marks : 1**

The sum of two numbers is 2000 and their LCM 21879. The two numbers are

1. 1993, 7
2. 1991, 9
3. 1989, 11
4. 1987, 13

**Options :**

- 5531722009. 1
- 5531722010. 2
- 5531722011. 3
- 5531722012. 4

**Question Number : 4 Question Id : 553172504 Question Type : MCQ Option Shuffling : No Display Question Number : Yes Single Line Question Option : No Option Orientation : Vertical**

**Correct Marks : 4 Wrong Marks : 1**

What decimal of an hour is a second?

1. .000126
2. .00027
3. .0025
4. .0256

**Options :**

- 5531722013. 1
- 5531722014. 2
- 5531722015. 3
- 5531722016. 4

**Question Number : 5 Question Id : 553172505 Question Type : MCQ Option Shuffling : No Display Question Number : Yes Single Line Question Option : No Option Orientation : Vertical**

**Correct Marks : 4 Wrong Marks : 1**

$$4 + 4 \cdot 44 + 0 \cdot 4 + 44 \cdot 04 + 444 = ?$$

1. 469.88
2. 487.66
3. 496.88
4. 497.24

**Options :**

- 5531722017. 1
- 5531722018. 2
- 5531722019. 3
- 5531722020. 4

**Question Number : 6 Question Id : 553172506 Question Type : MCQ Option Shuffling : No Display Question Number : Yes Single Line Question Option : No Option Orientation : Vertical**

**Correct Marks : 4 Wrong Marks : 1**

$$(425 \times 4000) \div 16000 \times 12 =$$

1. 1275
2. 925
3. 1700
4. 8.85

**Options :**

- 5531722021. 1
- 5531722022. 2
- 5531722023. 3
- 5531722024. 4

**Question Number : 7 Question Id : 553172507 Question Type : MCQ Option Shuffling : No Display Question Number : Yes Single Line Question Option : No Option Orientation : Vertical**

**Correct Marks : 4 Wrong Marks : 1**

If  $2p + 3q = 18$  and  $2p - q = 2$ , then  $2p + q = ?$

1. 6
2. 7
3. 10
4. 20

Options :

5531722025. 1  
5531722026. 2  
5531722027. 3  
5531722028. 4

Question Number : 8 Question Id : 553172508 Question Type : MCQ Option Shuffling : No Display Question Number : Yes Single Line Question Option : No Option Orientation : Vertical

Correct Marks : 4 Wrong Marks : 1

If  $0 \cdot 13 \div p^2 = 13$ , then  $p$  equals

1. 0.01
2. 10
3. 100
4. 0.1

Options :

5531722029. 1  
5531722030. 2  
5531722031. 3  
5531722032. 4

Question Number : 9 Question Id : 553172509 Question Type : MCQ Option Shuffling : No Display Question Number : Yes Single Line Question Option : No Option Orientation : Vertical

Correct Marks : 4 Wrong Marks : 1

1250 oranges were distributed among a group of girls of 6<sup>th</sup> class.  
Each girl got twice as many oranges as the number of girls in that group. The number of girls in the group were

1. 30
2. 25
3. 50
4. 100

Options :

5531722033. 1  
5531722034. 2  
5531722035. 3  
5531722036. 4

Question Number : 10 Question Id : 553172510 Question Type : MCQ Option Shuffling : No Display Question Number : Yes Single Line Question Option : No Option Orientation : Vertical

Correct Marks : 4 Wrong Marks : 1

The arithmetic mean of first 11 natural numbers is

1. 5
2. 5.5
3. 6.0
4. 6.5

Options :

- 5531722037. 1
- 5531722038. 2
- 5531722039. 3
- 5531722040. 4

Question Number : 11 Question Id : 553172511 Question Type : MCQ Option Shuffling : No Display Question Number : Yes  
Single Line Question Option : No Option Orientation : Vertical

Correct Marks : 4 Wrong Marks : 1

The mean of 25 observations was found to be 78.4. But later on it was found that 96 was misread as 69. The correct mean should be

1. 79.48
2. 76.54
3. 78.40
4. 81.32

Options :

- 5531722041. 1
- 5531722042. 2
- 5531722043. 3
- 5531722044. 4

Question Number : 12 Question Id : 553172512 Question Type : MCQ Option Shuffling : No Display Question Number : Yes  
Single Line Question Option : No Option Orientation : Vertical

Correct Marks : 4 Wrong Marks : 1

Find the number which when multiplied by 15 is increased by 196

1. 14
2. 20
3. 26
4. 28

Options :

- 5531722045. 1
- 5531722046. 2
- 5531722047. 3
- 5531722048. 4

Question Number : 13 Question Id : 553172513 Question Type : MCQ Option Shuffling : No Display Question Number : Yes  
Single Line Question Option : No Option Orientation : Vertical

Correct Marks : 4 Wrong Marks : 1

Ten years ago, a man was seven times as old as his son. Two years after today, twice his age will be equal to five times the age of his son. What is the present age of the son?

1. 14 years
2. 15 years
3. 12 years
4. 13 years

**Options :**

- 5531722049. 1
- 5531722050. 2
- 5531722051. 3
- 5531722052. 4

**Question Number : 14 Question Id : 553172514 Question Type : MCQ Option Shuffling : No Display Question Number : Yes Single Line Question Option : No Option Orientation : Vertical**

**Correct Marks : 4 Wrong Marks : 1**

The sum of the ages of John, Ram and Pratap is 93 years. Ten years ago, the ratio of their ages was 2:3:4. What is the present age of Pratap?

1. 24 years
2. 38 years
3. 34 years
4. 42 years

**Options :**

- 5531722053. 1
- 5531722054. 2
- 5531722055. 3
- 5531722056. 4

**Question Number : 15 Question Id : 553172515 Question Type : MCQ Option Shuffling : No Display Question Number : Yes Single Line Question Option : No Option Orientation : Vertical**

**Correct Marks : 4 Wrong Marks : 1**

**36% of 245 – 40% of 210 = 10 – ?**

1. 5·6
2. 4·2
3. 4·9
4. 5·8

**Options :**

- 5531722057. 1
- 5531722058. 2
- 5531722059. 3
- 5531722060. 4

**Question Number : 16 Question Id : 553172516 Question Type : MCQ Option Shuffling : No Display Question Number : Yes Single Line Question Option : No Option Orientation : Vertical**

**Correct Marks : 4 Wrong Marks : 1**

30% apples out of 450 are rotten. How many apples are in good condition?

1. 125
2. 180
3. 240
4. 315

**Options :**

- 5531722061. 1
- 5531722062. 2
- 5531722063. 3
- 5531722064. 4

**Question Number : 17 Question Id : 553172517 Question Type : MCQ Option Shuffling : No Display Question Number : Yes Single Line Question Option : No Option Orientation : Vertical**

**Correct Marks : 4 Wrong Marks : 1**

Nikhil purchased 20 dozen of toys at the rate of ₹375 per dozen. He sold each one of them as the rate of ₹33. What was his percentage profit?

1. 3·5
2. 4·5
3. 5·6
4. 6·5

**Options :**

- 5531722065. 1
- 5531722066. 2
- 5531722067. 3
- 5531722068. 4

**Question Number : 18 Question Id : 553172518 Question Type : MCQ Option Shuffling : No Display Question Number : Yes Single Line Question Option : No Option Orientation : Vertical**

**Correct Marks : 4 Wrong Marks : 1**

Manish purchased 25 kg of rice @ ₹32 per kg and 15 kg of rice @ ₹36 per kg. He mixed the two varieties of rice and sold it @ ₹40·20 per kg. What is the percent profit earned?

1. 30
2. 20
3. 25
4. 40

**Options :**

- 5531722069. 1
- 5531722070. 2
- 5531722071. 3
- 5531722072. 4

**Question Number : 19 Question Id : 553172519 Question Type : MCQ Option Shuffling : No Display Question Number : Yes Single Line Question Option : No Option Orientation : Vertical**

**Correct Marks : 4 Wrong Marks : 1**

A man buys 2 dozen bananas at ₹6 per dozen. After selling 18 bananas at the rate of ₹12 per dozen, the shopkeeper reduced the rate to ₹4 per dozen. The percent loss is

1. 36.5%
2. 37.5%
3. 25.2%
4. 32.4%

Options :

5531722073. 1

5531722074. 2

5531722075. 3

5531722076. 4

Question Number : 20 Question Id : 553172520 Question Type : MCQ Option Shuffling : No Display Question Number : Yes  
Single Line Question Option : No Option Orientation : Vertical

Correct Marks : 4 Wrong Marks : 1

If  $5 : a :: 20 : 28$ , then  $a$  is equal to

1. 7
2. 6
3. 8
4. 4

Options :

5531722077. 1

5531722078. 2

5531722079. 3

5531722080. 4

Question Number : 21 Question Id : 553172521 Question Type : MCQ Option Shuffling : No Display Question Number : Yes  
Single Line Question Option : No Option Orientation : Vertical

Correct Marks : 4 Wrong Marks : 1

Rita and Sona divided a sum of ₹25000 in the ratio of 3:2 respectively. If ₹5000 is added to each of their shares, what would be the new ratio?

1. 5 : 4
2. 4 : 3
3. 3 : 4
4. 2 : 3

Options :

5531722081. 1

5531722082. 2

5531722083. 3

5531722084. 4

Question Number : 22 Question Id : 553172522 Question Type : MCQ Option Shuffling : No Display Question Number : Yes  
Single Line Question Option : No Option Orientation : Vertical

Correct Marks : 4 Wrong Marks : 1



Deepak and Anju started a business investing ₹22500 and ₹35000 respectively out of a total profit of ₹13800, Deepak's share

is

1. ₹5400
2. ₹7200
3. ₹8400
4. ₹9600

**Options :**

5531722085. 1

5531722086. 2

5531722087. 3

5531722088. 4

**Question Number : 23 Question Id : 553172523 Question Type : MCQ Option Shuffling : No Display Question Number : Yes Single Line Question Option : No Option Orientation : Vertical**

**Correct Marks : 4 Wrong Marks : 1**

56 men can complete a piece of work in 24 days. In how many days can 42 men complete the same piece of work?

1. 48
2. 32
3. 98
4. 66

**Options :**

5531722089. 1

5531722090. 2

5531722091. 3

5531722092. 4

**Question Number : 24 Question Id : 553172524 Question Type : MCQ Option Shuffling : No Display Question Number : Yes Single Line Question Option : No Option Orientation : Vertical**

**Correct Marks : 4 Wrong Marks : 1**

Two pipes *A* and *B* can fill a tank in 20 and 30 minutes respectively. If both the pipes are used together, how long will it take to fill the tank?

1. 12 minutes
2. 15 minutes
3. 50 minutes
4. 35 minutes

**Options :**

5531722093. 1

5531722094. 2

5531722095. 3

5531722096. 4

**Question Number : 25 Question Id : 553172525 Question Type : MCQ Option Shuffling : No Display Question Number : Yes Single Line Question Option : No Option Orientation : Vertical**

**Correct Marks : 4 Wrong Marks : 1**

Sameera can knit a pair of socks in 3 days. Dharani can knit the same pair in 9 days. If they are knitting together, then in how many days will they knit two pairs of socks?

1. 3 days
2. 4 days
3.  $3\frac{1}{2}$  days
4.  $4\frac{1}{2}$  days

**Options :**

5531722097. 1

5531722098. 2

5531722099. 3

5531722100. 4

**Question Number : 26 Question Id : 553172526 Question Type : MCQ Option Shuffling : No Display Question Number : Yes Single Line Question Option : No Option Orientation : Vertical**

**Correct Marks : 4 Wrong Marks : 1**

Khana, Raj and Uday can independently complete a piece of work in 6 hours, 4 hours and 12 hours respectively. If they work together, how much time will they take to complete that piece of work?

1. 8 hours
2. 4 hours
3. 2 hours
4. 9 hours

**Options :**

5531722101. 1

5531722102. 2

5531722103. 3

5531722104. 4

**Question Number : 27 Question Id : 553172527 Question Type : MCQ Option Shuffling : No Display Question Number : Yes Single Line Question Option : No Option Orientation : Vertical**

**Correct Marks : 4 Wrong Marks : 1**

A boy riding his motorbike covers 150 meters in 25 seconds. What is his speed in km per hour?

1. 24·3 km/hr
2. 20·4 km/hr
3. 24 km/hr
4. 21·6 km/hr

**Options :**

5531722105. 1

5531722106. 2

5531722107. 3

5531722108. 4

**Question Number : 28 Question Id : 553172528 Question Type : MCQ Option Shuffling : No Display Question Number : Yes Single Line Question Option : No Option Orientation : Vertical**

**Correct Marks : 4 Wrong Marks : 1**

A boy rides his bicycle 10 km at an average speed of 12 km/hr and again travels 12 km at an average speed of 10 km/hr. His average speed for the entire trip is approximately

1. 9.8 km/hr
2. 10.8 km/hr
3. 11.2 km/hr
4. 8.2 km/hr

Options :

5531722109. 1

5531722110. 2

5531722111. 3

5531722112. 4

Question Number : 29 Question Id : 553172529 Question Type : MCQ Option Shuffling : No Display Question Number : Yes  
Single Line Question Option : No Option Orientation : Vertical

Correct Marks : 4 Wrong Marks : 1

Find the ratio in which rice at ₹7.20 a kg be mixed with rice at ₹5.70 per kg to produce a mixture worth ₹6.30 per kg

1. 1 : 3
2. 3 : 5
3. 2 : 3
4. 3 : 1

Options :

5531722113. 1

5531722114. 2

5531722115. 3

5531722116. 4

Question Number : 30 Question Id : 553172530 Question Type : MCQ Option Shuffling : No Display Question Number : Yes  
Single Line Question Option : No Option Orientation : Vertical

Correct Marks : 4 Wrong Marks : 1

Ankit borrowed a sum of money from Jayant at the rate of 8% per annum simple interest for the first four years, 10% per annum for the next 6 years and 12% per annum for the period beyond 10 years. If he pays a total of ₹12160 as interest only at the end of 15 years, how much money did he borrow?

1. ₹12500
2. ₹8600
3. ₹8000
4. ₹10,000

Options :

5531722117. 1

5531722118. 2

5531722119. 3

5531722120. 4

Question Number : 31 Question Id : 553172531 Question Type : MCQ Option Shuffling : No Display Question Number : Yes  
Single Line Question Option : No Option Orientation : Vertical

Correct Marks : 4 Wrong Marks : 1

The compound interest accrued on an amount at the end of 3 years @ ₹15 per cent per annum is ₹6500.52. What was the capital amount?

1. ₹12480
2. ₹13620
3. ₹14804
4. ₹12920

Options :

5531722121. 1

5531722122. 2

5531722123. 3

5531722124. 4

Question Number : 32 Question Id : 553172532 Question Type : MCQ Option Shuffling : No Display Question Number : Yes  
Single Line Question Option : No Option Orientation : Vertical

Correct Marks : 4 Wrong Marks : 1

A courtyard 25 m long and 16 m broad is to be paved with bricks of dimensions 20 cm by 10 cm. The total number of bricks required is

1. 15,650
2. 16,800
3. 24,000
4. 20,000

Options :

5531722125. 1

5531722126. 2

5531722127. 3

5531722128. 4

Question Number : 33 Question Id : 553172533 Question Type : MCQ Option Shuffling : No Display Question Number : Yes  
Single Line Question Option : No Option Orientation : Vertical

Correct Marks : 4 Wrong Marks : 1

A man runs around a circular field of radius 50 m at the speed of 12 km/hr. What is the time taken by the man to take twenty rounds of the field?

1. 28 min
2.  $29\frac{1}{3}$  min
3.  $31\frac{3}{7}$  min
4. 32 min

Options :

5531722129. 1

5531722130. 2

5531722131. 3

5531722132. 4

Question Number : 34 Question Id : 553172534 Question Type : MCQ Option Shuffling : No Display Question Number : Yes  
Single Line Question Option : No Option Orientation : Vertical

Correct Marks : 4 Wrong Marks : 1

The angle between the minute hand and the hour hand of a clock when the time is 8:30, is

1.  $80^\circ$
2.  $75^\circ$
3.  $60^\circ$
4.  $105^\circ$

Options :

5531722133. 1  
5531722134. 2  
5531722135. 3  
5531722136. 4

Question Number : 35 Question Id : 553172535 Question Type : MCQ Option Shuffling : No Display Question Number : Yes  
Single Line Question Option : No Option Orientation : Vertical

Correct Marks : 4 Wrong Marks : 1

The top of a 15-meter-high tower makes an angle of deviation of  $60^\circ$  with the bottom of an electric pole and angle of elevation of  $30^\circ$  with the top of the pole. What is the height of the electric pole?

1. 5 meters
2. 8 meters
3. 10 meters
4. 12 meters

Options :

5531722137. 1  
5531722138. 2  
5531722139. 3  
5531722140. 4

Sub-Section Number: 2  
Sub-Section Id: 55317212  
Question Shuffling Allowed : Yes

Question Id : 553172536 Question Type : COMPREHENSION Sub Question Shuffling Allowed : Yes Group Comprehension Questions : No

Question Numbers : (36 to 40)

Question Label : Comprehension

Study the table below carefully and answer the questions that follow.

Classification of 100 students is based on the marks obtained by them in Agronomy and Biochemistry in an examination.

Marks out of 50 \ Subject	40 and above	30 and above	20 and above	10 and above	0 and above
Agronomy	9	32	80	92	100
Biochemistry	4	21	66	81	100
(Aggregate) Average	7	27	73	87	100

Sub questions



Question Number : 36 Question Id : 553172537 Question Type : MCQ Option Shuffling : No Display Question Number : Yes  
Single Line Question Option : No Option Orientation : Vertical

Correct Marks : 4 Wrong Marks : 1

The number of students scoring less than 40% marks in aggregate  
is

1. 13
2. 19
3. 20
4. 27

Options :

5531722141. 1

5531722142. 2

5531722143. 3

5531722144. 4

Question Number : 37 Question Id : 553172538 Question Type : MCQ Option Shuffling : No Display Question Number : Yes  
Single Line Question Option : No Option Orientation : Vertical

Correct Marks : 4 Wrong Marks : 1

If at least 60% marks in Agronomy are required for pursuing higher  
studies in Agronomy, how many students will be eligible to pursue  
higher studies in Agronomy?

1. 37
2. 32
3. 34
4. 36

Options :

5531722145. 1

5531722146. 2

5531722147. 3

5531722148. 4

Question Number : 38 Question Id : 553172539 Question Type : MCQ Option Shuffling : No Display Question Number : Yes  
Single Line Question Option : No Option Orientation : Vertical

Correct Marks : 4 Wrong Marks : 1

What is the difference between the number of students passed  
with 30 as cut-of-marks in Biochemistry and those passed with 30  
as cut-off marks in aggregate?

1. 4
2. 3
3. 5
4. 6

Options :

5531722149. 1

5531722150. 2

5531722151. 3

5531722152. 4

Question Number : 39 Question Id : 553172540 Question Type : MCQ Option Shuffling : No Display Question Number : Yes  
Single Line Question Option : No Option Orientation : Vertical

Correct Marks : 4 Wrong Marks : 1

The percentage of the number of students getting at least 60% marks in Biochemistry over those getting at least 40% marks in aggregate, is approximately

1. 21%
2. 27%
3. 29%
4. 31%

Options :

5531722153. 1

5531722154. 2

5531722155. 3

5531722156. 4

Question Number : 40 Question Id : 553172541 Question Type : MCQ Option Shuffling : No Display Question Number : Yes Single Line Question Option : No Option Orientation : Vertical

Correct Marks : 4 Wrong Marks : 1

If it is known that at least 23 students were eligible for a symposium on Biochemistry, the minimum qualifying marks in Biochemistry for eligibility to symposium would be in the range

1. 20–30
2. 30–40
3. 40–50
4. 50–60

Options :

5531722157. 1

5531722158. 2

5531722159. 3

5531722160. 4

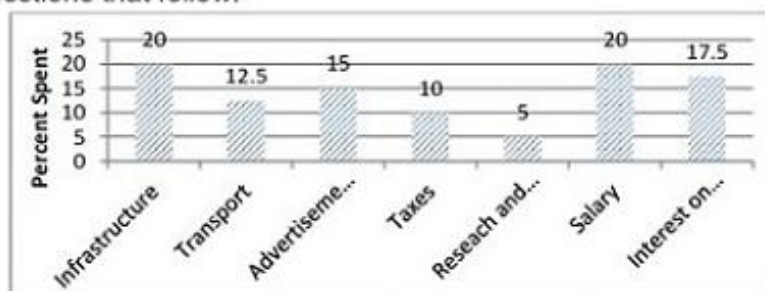
Sub-Section Number: 3  
Sub-Section Id: 55317213  
Question Shuffling Allowed : Yes

Question Id : 553172542 Question Type : COMPREHENSION Sub Question Shuffling Allowed : Yes Group Comprehension Questions : No

Question Numbers : (41 to 45)

Question Label : Comprehension

The bar-graph given below shows the percentage distribution of total expenditures of food processing company under various expense heads during 2013. Study the graph and answer the questions that follow.



Percentage Distribution of Total Expenditure of a Company

## Sub questions

Question Number : 41 Question Id : 553172543 Question Type : MCQ Option Shuffling : No Display Question Number : Yes  
Single Line Question Option : No Option Orientation : Vertical

Correct Marks : 4 Wrong Marks : 1

The expenditures on the interest on loans is by what percent more than the expenditures on transport

1. 5%
2. 10%
3. 20%
4. 40%

Options :

5531722161. 1

5531722162. 2

5531722163. 3

5531722164. 4

Question Number : 42 Question Id : 553172544 Question Type : MCQ Option Shuffling : No Display Question Number : Yes  
Single Line Question Option : No Option Orientation : Vertical

Correct Marks : 4 Wrong Marks : 1

What is the ratio of the total expenditure on infrastructure and transport to the total expenditure on taxes and interest on loans?

1. 5 : 4
2. 8 : 7
3. 9 : 7
4. 13 : 11

Options :

5531722165. 1

5531722166. 2

5531722167. 3

5531722168. 4

Question Number : 43 Question Id : 553172545 Question Type : MCQ Option Shuffling : No Display Question Number : Yes  
Single Line Question Option : No Option Orientation : Vertical

Correct Marks : 4 Wrong Marks : 1

If the expenditure on advertisement is Rs 2-10 crores then the difference between the expenditures on transport and taxes is

1. Rs 1-25 crores
2. Rs 95 lakhs
3. Rs 35 lakhs
4. Rs 25 lakhs

Options :

5531722169. 1

5531722170. 2

5531722171. 3

5531722172. 4

Question Number : 44 Question Id : 553172546 Question Type : MCQ Option Shuffling : No Display Question Number : Yes  
Single Line Question Option : No Option Orientation : Vertical

Correct Marks : 4 Wrong Marks : 1



The total amount of expenditure of the company is how many times the expenditure on research and development?

1. 27
2. 20
3. 18
4. 8

**Options :**

5531722173. 1

5531722174. 2

5531722175. 3

5531722176. 4

**Question Number : 45 Question Id : 553172547 Question Type : MCQ Option Shuffling : No Display Question Number : Yes Single Line Question Option : No Option Orientation : Vertical**

**Correct Marks : 4 Wrong Marks : 1**

If the interest on loans amounted to Rs 2.45 crores then the total amount of expenditure on advertisement, taxes and research and development is

1. Rs 7 crores
2. Rs 5.4 crores
3. Rs 4.2 crores
4. Rs 3 crores

**Options :**

5531722177. 1

5531722178. 2

5531722179. 3

5531722180. 4

<b>Sub-Section Number:</b>	4
<b>Sub-Section Id:</b>	55317214
<b>Question Shuffling Allowed :</b>	Yes

**Question Id : 553172548 Question Type : COMPREHENSION Sub Question Shuffling Allowed : Yes Group Comprehension Questions : No**

**Question Numbers : (46 to 52)**

**Question Label : Comprehension**

Read the following passage carefully and answer the questions given below.

A new US study has warned that adolescents who take performance enhancing anabolic steroids are more likely to have adverse neural and behavioral consequences, like aggression and moodiness because of the steroids effect on the underdeveloped brain and nervous system. The study, by Northeastern University in the US, centered around a brain chemical call serotonin, which is linked to a mood. Lower levels of serotonin are associated with depression and aggression. For the study, experiments were carried out on a brain of Syrian hamster. This breed has similar neurological circuitry to humans in this respect. The hamsters were given a high dose of anabolic steroids over the course of a month—which corresponded to five years, repeated dosage in humans. The researchers found that the hamsters were more aggressive than those not given steroids and these aggressive tendencies were mellowed if Prozac—a drug which boosts steroids “uptake” was given. However subsequent analysis showed significantly lower than normal serotonin levels in the neural connections of the hamster's brains. This suggests there may be a long-term effect of taking steroids while the brain is still developing. Professor Richard Mellohi, who helped run the study, was quoted as saying by BBC. “We know testosterone or steroids affect the development of serotonin availability in the brain. The serotonin neural system is developing during adolescence and the use of anabolic steroids during this critical period appears to have immediate neural and behavioral consequences.

**Sub questions**

**Question Number : 46 Question Id : 553172549 Question Type : MCQ Option Shuffling : No Display Question Number : Yes Single Line Question Option : No Option Orientation : Vertical**

**Correct Marks : 4 Wrong Marks : 1**

Which of the following sentences is true, according to the passage?

1. Those taking steroids are likely to face long term neural and behavioral implications
2. Higher serotonin intake is good for brain function
3. Adolescents are more likely to have neural and behavioral disorder
4. Depression and aggression are caused by a lower intake of serotonin

**Options :**

5531722181. 1

5531722182. 2

5531722183. 3

5531722184. 4

**Question Number : 47 Question Id : 553172550 Question Type : MCQ Option Shuffling : No Display Question Number : Yes Single Line Question Option : No Option Orientation : Vertical**

**Correct Marks : 4 Wrong Marks : 1**

Why do adolescents develop neural disorders?

1. Steroids effects the under developed brain more
2. The effect of steroids hampers the growth of the brain
3. Due to a decrease in the level of serotonin in the blood
4. Prozac, if taken in excess by adolescents makes them aggressive

Options :

- 5531722185. 1
- 5531722186. 2
- 5531722187. 3
- 5531722188. 4

Question Number : 48 Question Id : 553172551 Question Type : MCQ Option Shuffling : No Display Question Number : Yes  
Single Line Question Option : No Option Orientation : Vertical

Correct Marks : 4 Wrong Marks : 1

Why were Syrian hamster considered for the experiments?

1. They were easily available
2. They have a similar neurological circuitry as human beings
3. They were similar to humans in their metabolic function
4. The effect steroids has on them is similar as on human beings

Options :

- 5531722189. 1
- 5531722190. 2
- 5531722191. 3
- 5531722192. 4

Question Number : 49 Question Id : 553172552 Question Type : MCQ Option Shuffling : No Display Question Number : Yes  
Single Line Question Option : No Option Orientation : Vertical

Correct Marks : 4 Wrong Marks : 1

The drug that boosts serotonin uptake is

1. Melanin
2. Penicillin
3. Prozac
4. Erythrocytes

Options :

- 5531722193. 1
- 5531722194. 2
- 5531722195. 3
- 5531722196. 4

Question Number : 50 Question Id : 553172553 Question Type : MCQ Option Shuffling : No Display Question Number : Yes  
Single Line Question Option : No Option Orientation : Vertical

Correct Marks : 4 Wrong Marks : 1

Upon which breed of mammals were the experiments carried out?

1. Sicilian gangsters
2. Italian hamsters
3. Syrian hamsters
4. Adolescents

Options :

5531722197. 1

5531722198. 2

5531722199. 3

5531722200. 4

Question Number : 51 Question Id : 553172554 Question Type : MCQ Option Shuffling : No Display Question Number : Yes  
Single Line Question Option : No Option Orientation : Vertical

Correct Marks : 4 Wrong Marks : 1

The thrust areas of the research mentioned in the passage was the

1. development of the serotonin nerve cells
2. effect of serotonin on the human brain
3. effect of high doses of anabolic steroids
4. immediate neural and behavioral consequences of the use of anabolic steroids

Options :

5531722201. 1

5531722202. 2

5531722203. 3

5531722204. 4

Question Number : 52 Question Id : 553172555 Question Type : MCQ Option Shuffling : No Display Question Number : Yes  
Single Line Question Option : No Option Orientation : Vertical

Correct Marks : 4 Wrong Marks : 1

The passage could be best described as

1. instructive
2. suggestive
3. scientific
4. causative

Options :

5531722205. 1

5531722206. 2

5531722207. 3

5531722208. 4

Sub-Section Number:	5
Sub-Section Id:	55317215
Question Shuffling Allowed :	Yes

Question Number : 53 Question Id : 553172556 Question Type : MCQ Option Shuffling : No Display Question Number : Yes  
Single Line Question Option : No Option Orientation : Vertical

Correct Marks : 4 Wrong Marks : 1

Choose the option closest in meaning to the word given -  
Stipulation

1. imitation
2. signal
3. excitement
4. requirement

Options :

5531722209. 1

5531722210. 2

5531722211. 3

5531722212. 4

Question Number : 54 Question Id : 553172557 Question Type : MCQ Option Shuffling : No Display Question Number : Yes  
Single Line Question Option : No Option Orientation : Vertical

Correct Marks : 4 Wrong Marks : 1

Choose the option closest in meaning to the word - Protagonist

1. prophet
2. explorer
3. talented child
4. leading character

Options :

5531722213. 1

5531722214. 2

5531722215. 3

5531722216. 4

Question Number : 55 Question Id : 553172558 Question Type : MCQ Option Shuffling : No Display Question Number : Yes  
Single Line Question Option : No Option Orientation : Vertical

Correct Marks : 4 Wrong Marks : 1

Choose the option closest in meaning to the word - Entrenched

1. filled up
2. fortified
3. followed by
4. kept down

Options :

5531722217. 1

5531722218. 2

5531722219. 3

5531722220. 4

Question Number : 56 Question Id : 553172559 Question Type : MCQ Option Shuffling : No Display Question Number : Yes  
Single Line Question Option : No Option Orientation : Vertical

Correct Marks : 4 Wrong Marks : 1



Choose the option closest in meaning to the word - Counterpart

1. hindrance
2. peace offering
3. password
4. complimentary

Options :

- 5531722221. 1
- 5531722222. 2
- 5531722223. 3
- 5531722224. 4

Question Number : 57 Question Id : 553172560 Question Type : MCQ Option Shuffling : No Display Question Number : Yes  
Single Line Question Option : No Option Orientation : Vertical

Correct Marks : 4 Wrong Marks : 1

Choose the option closest in meaning to the word - Sage

1. wiseman
2. tale
3. era
4. fool

Options :

- 5531722225. 1
- 5531722226. 2
- 5531722227. 3
- 5531722228. 4

Sub-Section Number:	6
Sub-Section Id:	55317216
Question Shuffling Allowed :	Yes

Question Number : 58 Question Id : 553172561 Question Type : MCQ Option Shuffling : No Display Question Number : Yes  
Single Line Question Option : No Option Orientation : Vertical

Correct Marks : 4 Wrong Marks : 1

Choose the word which is NOT a synonym for the word -  
Accumulation

1. collection
2. conglomeration
3. assemblage
4. collagen

Options :

- 5531722229. 1
- 5531722230. 2
- 5531722231. 3
- 5531722232. 4

Question Number : 59 Question Id : 553172562 Question Type : MCQ Option Shuffling : No Display Question Number : Yes  
Single Line Question Option : No Option Orientation : Vertical

Correct Marks : 4 Wrong Marks : 1

Choose the word which is NOT a synonym for the word -  
Persistence

1. perilous
2. sedulity
3. pertinacity
4. plodding

Options :

5531722233. 1

5531722234. 2

5531722235. 3

5531722236. 4

Question Number : 60 Question Id : 553172563 Question Type : MCQ Option Shuffling : No Display Question Number : Yes  
Single Line Question Option : No Option Orientation : Vertical

Correct Marks : 4 Wrong Marks : 1

Choose the word which is NOT a synonym for the word- Relax

1. rest
2. unwind
3. meretricious
4. chaste

Options :

5531722237. 1

5531722238. 2

5531722239. 3

5531722240. 4

Question Number : 61 Question Id : 553172564 Question Type : MCQ Option Shuffling : No Display Question Number : Yes  
Single Line Question Option : No Option Orientation : Vertical

Correct Marks : 4 Wrong Marks : 1

Choose the word which is NOT a synonym for the word - Symbol

1. design
2. pattern
3. motif
4. scrap

Options :

5531722241. 1

5531722242. 2

5531722243. 3

5531722244. 4

Question Number : 62 Question Id : 553172565 Question Type : MCQ Option Shuffling : No Display Question Number : Yes  
Single Line Question Option : No Option Orientation : Vertical

Correct Marks : 4 Wrong Marks : 1

Choose the word which is NOT a synonym for the word - Portable

1. movable
2. immovable
3. mobile
4. transferable

**Options :**

- 5531722245. 1
- 5531722246. 2
- 5531722247. 3
- 5531722248. 4

<b>Sub-Section Number:</b>	7
<b>Sub-Section Id:</b>	55317217
<b>Question Shuffling Allowed :</b>	Yes

**Question Number : 63 Question Id : 553172566 Question Type : MCQ Option Shuffling : No Display Question Number : Yes**  
**Single Line Question Option : No Option Orientation : Vertical**

**Correct Marks : 4 Wrong Marks : 1**

Choose the best option from the alternatives given to fill in the blank

This is good \_\_\_\_\_ for a picnic.

1. plot
2. spot
3. scene
4. landscape

**Options :**

- 5531722249. 1
- 5531722250. 2
- 5531722251. 3
- 5531722252. 4

**Question Number : 64 Question Id : 553172567 Question Type : MCQ Option Shuffling : No Display Question Number : Yes**  
**Single Line Question Option : No Option Orientation : Vertical**

**Correct Marks : 4 Wrong Marks : 1**

Choose the best option from the alternatives given to fill in the blank

The \_\_\_\_\_ of private limited companies is in the hands of its directors.

1. managers
2. administrators
3. management
4. society

**Options :**

- 5531722253. 1
- 5531722254. 2



5531722255. 3

5531722256. 4

**Question Number : 65 Question Id : 553172568 Question Type : MCQ Option Shuffling : No Display Question Number : Yes  
Single Line Question Option : No Option Orientation : Vertical**

**Correct Marks : 4 Wrong Marks : 1**

Choose the best option from the alternatives given to fill in the blank

There is no place for \_\_\_\_\_ in an accountant's job.

1. assets
2. asserts
3. errors
4. duffers

**Options :**

5531722257. 1

5531722258. 2

5531722259. 3

5531722260. 4

**Question Number : 66 Question Id : 553172569 Question Type : MCQ Option Shuffling : No Display Question Number : Yes  
Single Line Question Option : No Option Orientation : Vertical**

**Correct Marks : 4 Wrong Marks : 1**

Choose the best option from the alternatives given to fill in the blank

Gandhi \_\_\_\_\_ the cause of the untouchables.

1. blessed
2. held
3. advocated
4. argued

**Options :**

5531722261. 1

5531722262. 2

5531722263. 3

5531722264. 4

**Question Number : 67 Question Id : 553172570 Question Type : MCQ Option Shuffling : No Display Question Number : Yes  
Single Line Question Option : No Option Orientation : Vertical**

**Correct Marks : 4 Wrong Marks : 1**

Choose the best option from the alternatives given to fill in the blank

\_\_\_\_\_ and ecstasy are two sides of a puzzle called life.

1. Pain
2. Penury
3. Losses
4. Serendipity

**Options :**

5531722265. 1

5531722266. 2

5531722267. 3

Sub-Section Number: 8  
 Sub-Section Id: 55317218  
 Question Shuffling Allowed : Yes

Question Id : 553172571 Question Type : COMPREHENSION Sub Question Shuffling Allowed : Yes Group Comprehension Questions : No

Question Numbers : (68 to 72)

Question Label : Comprehension

For each of the following questions, a part or the whole of the original sentence has been underlined. You have to find the best way of writing the underlined part of the sentence.

Sub questions

Question Number : 68 Question Id : 553172572 Question Type : MCQ Option Shuffling : No Display Question Number : Yes Single Line Question Option : No Option Orientation : Vertical

Correct Marks : 4 Wrong Marks : 1

Start the engine, and then have to press the accelerator.

1. Start the engine, and then have to press
2. Start the engine and then press
3. Start the engine, then go on pressing
4. Starting the engine, then pressing

Options :

5531722269. 1

5531722270. 2

5531722271. 3

5531722272. 4

Question Number : 69 Question Id : 553172573 Question Type : MCQ Option Shuffling : No Display Question Number : Yes Single Line Question Option : No Option Orientation : Vertical

Correct Marks : 4 Wrong Marks : 1

In rural India, many mango trees are planted at the end of a village or at the borders of a district, with regard to provide excellent shade during summer, and shelter during winter.

1. with regard to provide excellent shade during summer, and shelter during winter.
2. to provide excellent shade in summer, and shelter in winter.
3. in order to excellently provide excellent shade in summer, and shelter in winter.
4. so as to excellently provide shade in summer, and shelter in winter.

Options :

5531722273. 1

5531722274. 2

5531722275. 3

5531722276. 4

Question Number : 70 Question Id : 553172574 Question Type : MCQ Option Shuffling : No Display Question Number : Yes Single Line Question Option : No Option Orientation : Vertical

Correct Marks : 4 Wrong Marks : 1

Many middle-class South Asians find that they cannot obtain good medical attention, despite the fact they need it badly.

1. they need it badly.
2. they badly need it.
3. of they need it badly.
4. that they need it badly.

Options :

5531722277. 1

5531722278. 2

5531722279. 3

5531722280. 4

Question Number : 71 Question Id : 553172575 Question Type : MCQ Option Shuffling : No Display Question Number : Yes  
Single Line Question Option : No Option Orientation : Vertical

Correct Marks : 4 Wrong Marks : 1

The world today is totally different than, we have seen in the last century.

1. than, we have seen
2. from what we have seen
3. from what we seen
4. than what we seen

Options :

5531722281. 1

5531722282. 2

5531722283. 3

5531722284. 4

Question Number : 72 Question Id : 553172576 Question Type : MCQ Option Shuffling : No Display Question Number : Yes  
Single Line Question Option : No Option Orientation : Vertical

Correct Marks : 4 Wrong Marks : 1

Panchayati Raj institutions are now entrusted upon the execution of all rural upliftment schemes and programs in India.

1. entrusted upon the execution of all rural upliftment schemes and programs
2. entrusted with the execution of all rural uplift schemes and programs
3. entrusted with the execution of all rural upliftment schemes and programs
4. entrusted within the execution for all rural uplift programs and schemes

Options :

5531722285. 1

5531722286. 2

5531722287. 3

5531722288. 4

Sub-Section Number:

9

Sub-Section Id:

55317219

Question Shuffling Allowed :

Yes

Question Number : 73 Question Id : 553172577 Question Type : MCQ Option Shuffling : No Display Question Number : Yes  
Single Line Question Option : No Option Orientation : Vertical

Correct Marks : 4 Wrong Marks : 1

Choose the correctly spelled word.

1. Interfrence
2. Interference
3. Intirference
4. Intriference

Options :

5531722289. 1

5531722290. 2

5531722291. 3

5531722292. 4

Question Number : 74 Question Id : 553172578 Question Type : MCQ Option Shuffling : No Display Question Number : Yes  
Single Line Question Option : No Option Orientation : Vertical

Correct Marks : 4 Wrong Marks : 1

Choose the correctly spelled word.

1. Discourteous
2. Discurteoues
3. Discourteoues
4. Discourtious

Options :

5531722293. 1

5531722294. 2

5531722295. 3

5531722296. 4

Question Number : 75 Question Id : 553172579 Question Type : MCQ Option Shuffling : No Display Question Number : Yes  
Single Line Question Option : No Option Orientation : Vertical

Correct Marks : 4 Wrong Marks : 1

Choose the correctly spelled word.

1. Photogenic
2. Photogenic
3. Photojenic
4. Photojinic

Options :

5531722297. 1

5531722298. 2

5531722299. 3

5531722300. 4

Question Number : 76 Question Id : 553172580 Question Type : MCQ Option Shuffling : No Display Question Number : Yes  
Single Line Question Option : No Option Orientation : Vertical

Correct Marks : 4 Wrong Marks : 1

Choose the correctly spelled word.

1. Pheinine
2. Fimenine
3. Phiminine
4. Feminine

**Options :**

5531722301. 1

5531722302. 2

5531722303. 3

5531722304. 4

**Sub-Section Number:** 10  
**Sub-Section Id:** 55317220  
**Question Shuffling Allowed :** Yes

**Question Id : 553172581 Question Type : COMPREHENSION Sub Question Shuffling Allowed : Yes Group Comprehension Questions : No**

**Question Numbers : (77 to 80)**

**Question Label : Comprehension**

Each question below consists of expressions followed by four words, choose the word that is similar in meaning to the given expression.

**Sub questions**

**Question Number : 77 Question Id : 553172582 Question Type : MCQ Option Shuffling : No Display Question Number : Yes Single Line Question Option : No Option Orientation : Vertical**

**Correct Marks : 4 Wrong Marks : 1**

A written declaration made on oath in the presence of a magistrate

1. document
2. affidavit
3. dossier
4. voucher

**Options :**

5531722305. 1

5531722306. 2

5531722307. 3

5531722308. 4

**Question Number : 78 Question Id : 553172583 Question Type : MCQ Option Shuffling : No Display Question Number : Yes Single Line Question Option : No Option Orientation : Vertical**

**Correct Marks : 4 Wrong Marks : 1**



A government in which all religions are honoured

1. fanatic
2. autocracy
3. secular
4. democracy

Options :

5531722309. 1

5531722310. 2

5531722311. 3

5531722312. 4

Question Number : 79 Question Id : 553172584 Question Type : MCQ Option Shuffling : No Display Question Number : Yes  
Single Line Question Option : No Option Orientation : Vertical

Correct Marks : 4 Wrong Marks : 1

To cast pearls before swine

1. to express choice thought etc., before on unappreciative audience
2. to publicly denounce
3. high appreciation of something
4. to reject as a worthless

Options :

5531722313. 1

5531722314. 2

5531722315. 3

5531722316. 4

Question Number : 80 Question Id : 553172585 Question Type : MCQ Option Shuffling : No Display Question Number : Yes  
Single Line Question Option : No Option Orientation : Vertical

Correct Marks : 4 Wrong Marks : 1

To keep the ball rolling

1. to continue the work
2. to do well in business
3. to pass the latest information
4. to play the match

Options :

5531722317. 1

5531722318. 2

5531722319. 3

5531722320. 4

Sub-Section Number:	11
Sub-Section Id:	55317221
Question Shuffling Allowed :	Yes

Question Id : 553172586 Question Type : COMPREHENSION Sub Question Shuffling Allowed : Yes Group Comprehension Questions : No

**Question Numbers : (81 to 85)**

Question Label : Comprehension

In each of the following questions, choose the missing word in place of question mark (?) on the basis of the relationship between the words given on the left/right hand side of the sign of analogy.

**Sub questions**

**Question Number : 81 Question Id : 553172587 Question Type : MCQ Option Shuffling : No Display Question Number : Yes Single Line Question Option : No Option Orientation : Vertical**

**Correct Marks : 4 Wrong Marks : 1**

**Good : Bad :: Virtue : ?**

1. Blame
2. Sin
3. Despair
4. Vice

**Options :**

5531722321. 1

5531722322. 2

5531722323. 3

5531722324. 4

**Question Number : 82 Question Id : 553172588 Question Type : MCQ Option Shuffling : No Display Question Number : Yes Single Line Question Option : No Option Orientation : Vertical**

**Correct Marks : 4 Wrong Marks : 1**

**Taka : Bangladesh :: Lira : ?**

1. Kuwait
2. Italy
3. Shri Lanka
4. Kenya

**Options :**

5531722325. 1

5531722326. 2

5531722327. 3

5531722328. 4

**Question Number : 83 Question Id : 553172589 Question Type : MCQ Option Shuffling : No Display Question Number : Yes Single Line Question Option : No Option Orientation : Vertical**

**Correct Marks : 4 Wrong Marks : 1**

**Food : Stomach :: Fuel : ?**

1. Engine
2. Automobile
3. Rail
4. Aero plane

**Options :**

5531722329. 1

5531722330. 2

5531722331. 3

5531722332. 4

**Question Number : 84 Question Id : 553172590 Question Type : MCQ Option Shuffling : No Display Question Number : Yes  
Single Line Question Option : No Option Orientation : Vertical**

**Correct Marks : 4 Wrong Marks : 1**

**Tree : Root :: Smoke : ?**

1. Cigarette
2. Fire
3. Heat
4. Chimney

**Options :**

5531722333. 1

5531722334. 2

5531722335. 3

5531722336. 4

**Question Number : 85 Question Id : 553172591 Question Type : MCQ Option Shuffling : No Display Question Number : Yes  
Single Line Question Option : No Option Orientation : Vertical**

**Correct Marks : 4 Wrong Marks : 1**

**Umpire : Match :: Judge : ?**

1. Bar council
2. Lawyer
3. Judgement
4. Lawsuit

**Options :**

5531722337. 1

5531722338. 2

5531722339. 3

5531722340. 4

**Sub-Section Number:** 12  
**Sub-Section Id:** 55317222  
**Question Shuffling Allowed :** Yes

**Question Id : 553172592 Question Type : COMPREHENSION Sub Question Shuffling Allowed : Yes Group Comprehension  
Questions : No**

**Question Numbers : (86 to 88)**

**Question Label : Comprehension**

In each of the following questions, three out of four alternatives contains letters/numbers of the alphabet placed in a particular form. Find the one that does not belong to the group.

**Sub questions**

**Question Number : 86 Question Id : 553172593 Question Type : MCQ Option Shuffling : No Display Question Number : Yes  
Single Line Question Option : No Option Orientation : Vertical**

**Correct Marks : 4 Wrong Marks : 1**



1. GK
2. MQ
3. PU
4. SW

**Options :**

5531722341. 1
5531722342. 2
5531722343. 3
5531722344. 4

**Question Number : 87 Question Id : 553172594 Question Type : MCQ Option Shuffling : No Display Question Number : Yes  
Single Line Question Option : No Option Orientation : Vertical**

**Correct Marks : 4 Wrong Marks : 1**

1. C9K
2. H2OL
3. N31Q
4. E29Y

**Options :**

5531722345. 1
5531722346. 2
5531722347. 3
5531722348. 4

**Question Number : 88 Question Id : 553172595 Question Type : MCQ Option Shuffling : No Display Question Number : Yes  
Single Line Question Option : No Option Orientation : Vertical**

**Correct Marks : 4 Wrong Marks : 1**

1. MLI
2. FEB
3. UTQ
4. SRN

**Options :**

5531722349. 1
5531722350. 2
5531722351. 3
5531722352. 4

<b>Sub-Section Number:</b>	13
<b>Sub-Section Id:</b>	55317223
<b>Question Shuffling Allowed :</b>	Yes

**Question Number : 89 Question Id : 553172596 Question Type : MCQ Option Shuffling : No Display Question Number : Yes  
Single Line Question Option : No Option Orientation : Vertical**

**Correct Marks : 4 Wrong Marks : 1**

If the following scrambled letters are rearranged to form the name of city, which letter will appear in the middle?

A I D M U R A

1. M
2. R
3. U
4. D

**Options :**

5531722353. 1

5531722354. 2

5531722355. 3

5531722356. 4

**Question Number : 90 Question Id : 553172597 Question Type : MCQ Option Shuffling : No Display Question Number : Yes Single Line Question Option : No Option Orientation : Vertical**

**Correct Marks : 4 Wrong Marks : 1**

Study the number series given below and answer the question that follows:

7 8 9 7 6 5 3 4 2 8 9 7 2 4 5 9 2 9 7 6 4 7

How many 7's are preceded by 9 and followed by 6?

1. 5
2. 2
3. 4
4. 3

**Options :**

5531722357. 1

5531722358. 2

5531722359. 3

5531722360. 4

<b>Sub-Section Number:</b>	14
<b>Sub-Section Id:</b>	55317224
<b>Question Shuffling Allowed :</b>	Yes

**Question Id : 553172598 Question Type : COMPREHENSION Sub Question Shuffling Allowed : Yes Group Comprehension Questions : No**

**Question Numbers : (91 to 93)**

**Question Label : Comprehension**

Study the following statements A, B, C, D and E and then answer the questions that follow.

- A. 1, 5, 9 means: "you better go"
- B. 1, 6, 7 means: "better come here"
- C. 5, 6, 7 means: "you come here"
- D. 1, 5, 6 means: "better you here"
- E. 3, 7, 9 means: "come and go"

**Sub questions**

Question Number : 91 Question Id : 553172599 Question Type : MCQ Option Shuffling : No Display Question Number : Yes  
Single Line Question Option : No Option Orientation : Vertical

Correct Marks : 4 Wrong Marks : 1

Which numeral means 'and'?

1. 6
2. 9
3. 3
4. 7

Options :

5531722361. 1

5531722362. 2

5531722363. 3

5531722364. 4

Question Number : 92 Question Id : 553172600 Question Type : MCQ Option Shuffling : No Display Question Number : Yes  
Single Line Question Option : No Option Orientation : Vertical

Correct Marks : 4 Wrong Marks : 1

Which of the following groups of minimum statements are necessary to find the code number of 'better'?

1. A and B
2. D and E
3. C and E
4. B and E

Options :

5531722365. 1

5531722366. 2

5531722367. 3

5531722368. 4

Question Number : 93 Question Id : 553172601 Question Type : MCQ Option Shuffling : No Display Question Number : Yes  
Single Line Question Option : No Option Orientation : Vertical

Correct Marks : 4 Wrong Marks : 1

Which numeral is used for 'go'?

1. 9
2. 5
3. 7
4. 1

Options :

5531722369. 1

5531722370. 2

5531722371. 3

5531722372. 4

Sub-Section Id: 55317225  
Question Shuffling Allowed : Yes

Question Number : 94 Question Id : 553172602 Question Type : MCQ Option Shuffling : No Display Question Number : Yes  
Single Line Question Option : No Option Orientation : Vertical  
Correct Marks : 4 Wrong Marks : 1

Find the missing number in the series given below

975, 864, 753, 642, ?

1. 431
2. 314
3. 531
4. 532

Options :

5531722373. 1  
5531722374. 2  
5531722375. 3  
5531722376. 4

Question Number : 95 Question Id : 553172603 Question Type : MCQ Option Shuffling : No Display Question Number : Yes  
Single Line Question Option : No Option Orientation : Vertical  
Correct Marks : 4 Wrong Marks : 1

Find the missing number in the series given below

6, 42, ?, 1260, 5040, 15120, 30240

1. 546
2. 424
3. 252
4. 328

Options :

5531722377. 1  
5531722378. 2  
5531722379. 3  
5531722380. 4

Sub-Section Number: 16  
Sub-Section Id: 55317226  
Question Shuffling Allowed : Yes

Question Id : 553172604 Question Type : COMPREHENSION Sub Question Shuffling Allowed : Yes Group Comprehension Questions : No

Question Numbers : (96 to 97)

Question Label : Comprehension

In each of the following questions, arrange the given words in meaningful sequence and choose the correct sequence from the given alternatives.

Sub questions

Question Number : 96 Question Id : 553172605 Question Type : MCQ Option Shuffling : No Display Question Number : Yes  
Single Line Question Option : No Option Orientation : Vertical

Correct Marks : 4 Wrong Marks : 1

- a. poverty
- b. population
- c. death
- d. unemployment
- e. disease

- 1. c, d, b, e, a
- 2. b, d, a, e, c
- 3. b, c, d, e, a
- 4. a, b, c, d, e

Options :

5531722381. 1

5531722382. 2

5531722383. 3

5531722384. 4

Question Number : 97 Question Id : 553172606 Question Type : MCQ Option Shuffling : No Display Question Number : Yes  
Single Line Question Option : No Option Orientation : Vertical

Correct Marks : 4 Wrong Marks : 1

- a. table
- b. tree
- c. wood
- d. seed
- e. plant

- 1. d, e, c, b, a
- 2. d, e, b, c, a
- 3. a, c, b, d, e
- 4. a, b, c, d, e

Options :

5531722385. 1

5531722386. 2

5531722387. 3

5531722388. 4

Sub-Section Number:	17
Sub-Section Id:	55317227
Question Shuffling Allowed :	Yes

Question Id : 553172607 Question Type : COMPREHENSION Sub Question Shuffling Allowed : Yes Group Comprehension  
Questions : No

Question Numbers : (98 to 99)

Question Label : Comprehension

Which one of the given responses would be a meaningful order of the following words in ascending order?

Sub questions

Question Number : 98 Question Id : 553172608 Question Type : MCQ Option Shuffling : No Display Question Number : Yes Single Line Question Option : No Option Orientation : Vertical

Correct Marks : 4 Wrong Marks : 1

- a. Status
  - b. Education
  - c. Income
  - d. Job
  - e. Well-being
1. b, d, c, a, e
  2. c, a, d, b, e
  3. b, a, d, e, c
  4. d, b, c, e, a

Options :

- 5531722389. 1
- 5531722390. 2
- 5531722391. 3
- 5531722392. 4

Question Number : 99 Question Id : 553172609 Question Type : MCQ Option Shuffling : No Display Question Number : Yes Single Line Question Option : No Option Orientation : Vertical

Correct Marks : 4 Wrong Marks : 1

- a. Hecto
  - b. Centi
  - c. Kilo
  - d. Decu
  - e. Deci
1. b, d, a, e, c
  2. e, d, b, c, a
  3. b, e, d, a, c
  4. e, b, d, a, c

Options :

- 5531722393. 1
- 5531722394. 2
- 5531722395. 3
- 5531722396. 4

Sub-Section Number:	18
Sub-Section Id:	55317228
Question Shuffling Allowed :	Yes

Question Number : 100 Question Id : 553172610 Question Type : MCQ Option Shuffling : No Display Question Number : Yes  
Single Line Question Option : No Option Orientation : Vertical

Correct Marks : 4 Wrong Marks : 1

Arrange the following words as per order in the dictionary.

- a. Animated
- b. Humanistic
- c. Joker
- d. Carpenter

1. a, b, d, c

2. a, c, d, b

3. d, c, a, b

4. a, d, b, c

Options :

5531722397. 1

5531722398. 2

5531722399. 3

5531722400. 4

Question Number : 101 Question Id : 553172611 Question Type : MCQ Option Shuffling : No Display Question Number : Yes  
Single Line Question Option : No Option Orientation : Vertical

Correct Marks : 4 Wrong Marks : 1

Arrange the following words as per order in the dictionary.

- a. Necropolis
- b. Necromancy
- c. Necrology
- d. Necrophilia

1. b, a, d, c

2. a, b, c, d

3. c, b, d, a

4. d, b, c, a

Options :

5531722401. 1

5531722402. 2

5531722403. 3

5531722404. 4

Sub-Section Number:	19
Sub-Section Id:	55317229
Question Shuffling Allowed :	Yes

Question Id : 553172612 Question Type : COMPREHENSION Sub Question Shuffling Allowed : Yes Group Comprehension  
Questions : No

Question Numbers : (102 to 105)

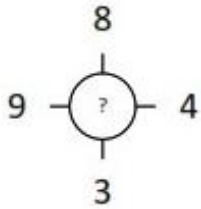
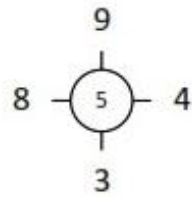
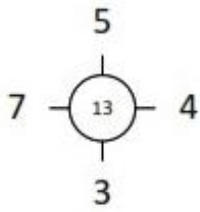
Question Label : Comprehension

In each of the following questions, which character when placed  
at the sign of interrogation (?) shall complete the given pattern:

Sub questions

Question Number : 102 Question Id : 553172613 Question Type : MCQ Option Shuffling : No Display Question Number : Yes  
Single Line Question Option : No Option Orientation : Vertical

Correct Marks : 4 Wrong Marks : 1



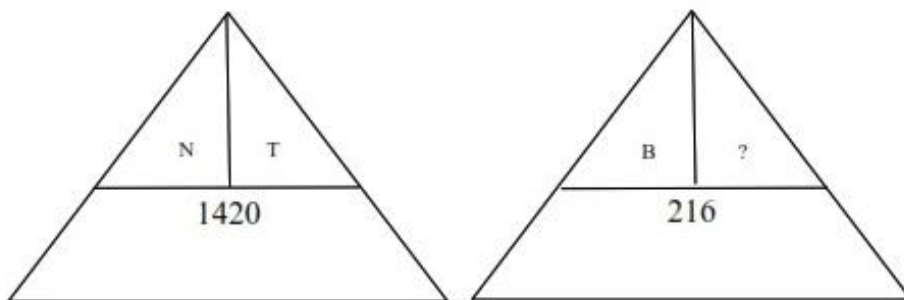
1. 12
2. 15
3. 18
4. 14

Options :

- 5531722405. 1
- 5531722406. 2
- 5531722407. 3
- 5531722408. 4

Question Number : 103 Question Id : 553172614 Question Type : MCQ Option Shuffling : No Display Question Number : Yes  
Single Line Question Option : No Option Orientation : Vertical

Correct Marks : 4 Wrong Marks : 1



1. P
2. H
3. M
4. L

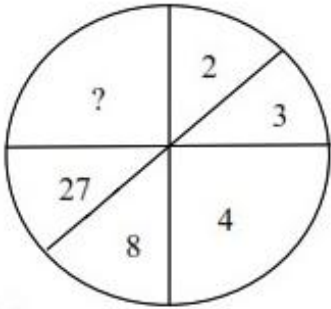
Options :

- 5531722409. 1
- 5531722410. 2
- 5531722411. 3
- 5531722412. 4



Question Number : 104 Question Id : 553172615 Question Type : MCQ Option Shuffling : No Display Question Number : Yes  
Single Line Question Option : No Option Orientation : Vertical

Correct Marks : 4 Wrong Marks : 1



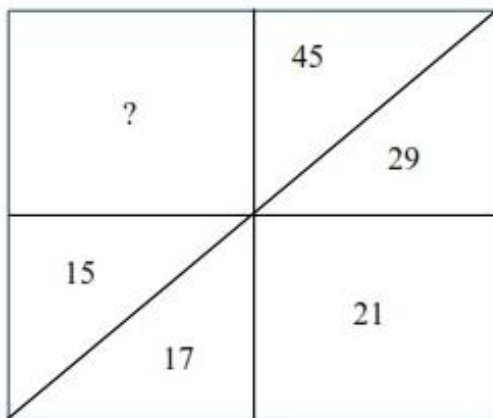
1. 64
2. 45
3. 94
4. 10

Options :

- 5531722413. 1
- 5531722414. 2
- 5531722415. 3
- 5531722416. 4

Question Number : 105 Question Id : 553172616 Question Type : MCQ Option Shuffling : No Display Question Number : Yes  
Single Line Question Option : No Option Orientation : Vertical

Correct Marks : 4 Wrong Marks : 1



1. 14
2. 8
3. 64
4. 15

Options :

- 5531722417. 1
- 5531722418. 2
- 5531722419. 3
- 5531722420. 4

**Sub-Section Number:** 20  
**Sub-Section Id:** 55317230  
**Question Shuffling Allowed :** Yes

**Question Id : 553172617 Question Type : COMPREHENSION Sub Question Shuffling Allowed : Yes Group Comprehension Questions : No**

**Question Numbers : (106 to 110)**

**Question Label : Comprehension**

Read the following information carefully and answer the questions that follow :

A blacksmith has five iron articles P, Q, R, S and T each having a different weight.

- i. P weighs twice as much as Q
- ii. Q weighs four and half times as much as R
- iii. R weighs half as much as S
- iv. S weighs half as much as T
- v. T weighs less than P but more than R

**Sub questions**

**Question Number : 106 Question Id : 553172618 Question Type : MCQ Option Shuffling : No Display Question Number : Yes Single Line Question Option : No Option Orientation : Vertical**

**Correct Marks : 4 Wrong Marks : 1**

Which of the following is the heaviest in weight?

1. Q
2. R
3. P
4. T

**Options :**

5531722421. 1

5531722422. 2

5531722423. 3

5531722424. 4

**Question Number : 107 Question Id : 553172619 Question Type : MCQ Option Shuffling : No Display Question Number : Yes Single Line Question Option : No Option Orientation : Vertical**

**Correct Marks : 4 Wrong Marks : 1**

T is heavier than which of the following two articles?

1. S, R
2. P, R
3. S, Q
4. P, Q

**Options :**

5531722425. 1

5531722426. 2

5531722427. 3

5531722428. 4

Question Number : 108 Question Id : 553172620 Question Type : MCQ Option Shuffling : No Display Question Number : Yes  
Single Line Question Option : No Option Orientation : Vertical

Correct Marks : 4 Wrong Marks : 1

Which of the following represents the descending orders of weights of the articles?

1. P, Q, S, R, T
2. Q, S, T, P, R
3. P, Q, T, S, R
4. S, T, Q, R, P

Options :

5531722429. 1

5531722430. 2

5531722431. 3

5531722432. 4

Question Number : 109 Question Id : 553172621 Question Type : MCQ Option Shuffling : No Display Question Number : Yes  
Single Line Question Option : No Option Orientation : Vertical

Correct Marks : 4 Wrong Marks : 1

'T' is lighter in weight than which of the other two articles?

1. Q, R
2. P, Q
3. P, R
4. S, T

Options :

5531722433. 1

5531722434. 2

5531722435. 3

5531722436. 4

Question Number : 110 Question Id : 553172622 Question Type : MCQ Option Shuffling : No Display Question Number : Yes  
Single Line Question Option : No Option Orientation : Vertical

Correct Marks : 4 Wrong Marks : 1

Which of the following is the lightest in the weight?

1. S
2. T
3. R
4. Q

Options :

5531722437. 1

5531722438. 2

5531722439. 3

5531722440. 4

Sub-Section Number: 21  
Sub-Section Id: 55317231  
Question Shuffling Allowed : Yes

Question Id : 553172623 Question Type : COMPREHENSION Sub Question Shuffling Allowed : Yes Group Comprehension Questions : No

Question Numbers : (111 to 113)

Question Label : Comprehension

If '-' denotes '×', '÷' denotes '+' and '+' denotes '-', then what will be the value of the following?

Sub questions

Question Number : 111 Question Id : 553172624 Question Type : MCQ Option Shuffling : No Display Question Number : Yes Single Line Question Option : No Option Orientation : Vertical

Correct Marks : 4 Wrong Marks : 1

$$14 \div 3 - 10 \div 30 + 4$$

1. 55
2. 70
3. 74
4. 68

Options :

- 5531722441. 1
- 5531722442. 2
- 5531722443. 3
- 5531722444. 4

Question Number : 112 Question Id : 553172625 Question Type : MCQ Option Shuffling : No Display Question Number : Yes Single Line Question Option : No Option Orientation : Vertical

Correct Marks : 4 Wrong Marks : 1

$$6 - 3 + 7 \div 5$$

1. 33
2. 52
3. 20
4. 18

Options :

- 5531722445. 1
- 5531722446. 2
- 5531722447. 3
- 5531722448. 4

Question Number : 113 Question Id : 553172626 Question Type : MCQ Option Shuffling : No Display Question Number : Yes Single Line Question Option : No Option Orientation : Vertical

Correct Marks : 4 Wrong Marks : 1

$$16 \div 18 + 7 \div 6 - 3$$

1. 54
2. 72
3. 23
4. 45

**Options :**

5531722449. 1

5531722450. 2

5531722451. 3

5531722452. 4

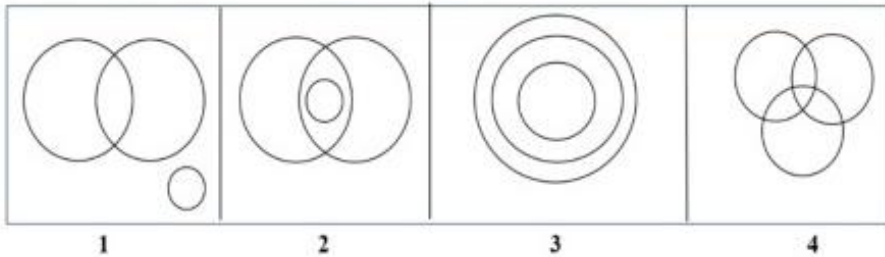
**Sub-Section Number:** 22  
**Sub-Section Id:** 55317232  
**Question Shuffling Allowed :** Yes

**Question Id : 553172627 Question Type : COMPREHENSION Sub Question Shuffling Allowed : Yes Group Comprehension Questions : No**

**Question Numbers : (114 to 116)**

**Question Label : Comprehension**

Each of the questions given below has three items having certain relationship among them. The same relationship is expressed by sets of circles, each circle representing one item irrespective of its size. Match the items with right set of circles.



**Sub questions**

**Question Number : 114 Question Id : 553172628 Question Type : MCQ Option Shuffling : No Display Question Number : Yes Single Line Question Option : No Option Orientation : Vertical**

**Correct Marks : 4 Wrong Marks : 1**

**Men, Married persons, Husbands who work**

1. 1

2. 3

3. 4

4. 2

**Options :**

5531722453. 1

5531722454. 2

5531722455. 3

5531722456. 4

**Question Number : 115 Question Id : 553172629 Question Type : MCQ Option Shuffling : No Display Question Number : Yes Single Line Question Option : No Option Orientation : Vertical**

**Correct Marks : 4 Wrong Marks : 1**

Necklace, Ornaments, Diamond necklace

1. 3
2. 2
3. 1
4. 4

Options :

- 5531722457. 1
- 5531722458. 2
- 5531722459. 3
- 5531722460. 4

Question Number : 116 Question Id : 553172630 Question Type : MCQ Option Shuffling : No Display Question Number : Yes  
Single Line Question Option : No Option Orientation : Vertical

Correct Marks : 4 Wrong Marks : 1

Technically skilled, Graduates, Employed

1. 1
2. 4
3. 2
4. 3

Options :

- 5531722461. 1
- 5531722462. 2
- 5531722463. 3
- 5531722464. 4

Sub-Section Number:	23
Sub-Section Id:	55317233
Question Shuffling Allowed :	Yes

Question Number : 117 Question Id : 553172631 Question Type : MCQ Option Shuffling : No Display Question Number : Yes  
Single Line Question Option : No Option Orientation : Vertical

Correct Marks : 4 Wrong Marks : 1

If today is Friday, then the day after 63 days will be

1. Saturday
2. Thursday
3. Monday
4. Friday

Options :

- 5531722465. 1
- 5531722466. 2
- 5531722467. 3
- 5531722468. 4



Question Number : 118 Question Id : 553172632 Question Type : MCQ Option Shuffling : No Display Question Number : Yes  
Single Line Question Option : No Option Orientation : Vertical

Correct Marks : 4 Wrong Marks : 1

Showing the lady in the park, Ajay said 'She is the daughter of my grandfather's only son'. How is Ajay related to that lady?

1. Uncle
2. Father
3. Brother
4. Cousin

Options :

5531722469. 1

5531722470. 2

5531722471. 3

5531722472. 4

Question Number : 119 Question Id : 553172633 Question Type : MCQ Option Shuffling : No Display Question Number : Yes  
Single Line Question Option : No Option Orientation : Vertical

Correct Marks : 4 Wrong Marks : 1

A's mother is sister of B and daughter of C. Whereas D is the daughter of B and sister of E. How is C related to E?

1. Grandmother or Grandfather
2. Sister
3. Father
4. Mother

Options :

5531722473. 1

5531722474. 2

5531722475. 3

5531722476. 4

Question Number : 120 Question Id : 553172634 Question Type : MCQ Option Shuffling : No Display Question Number : Yes  
Single Line Question Option : No Option Orientation : Vertical

Correct Marks : 4 Wrong Marks : 1

In a month of 31 days, third Thursday falls on 16<sup>th</sup>, then what will be the last day of the month?

1. 5<sup>th</sup> Wednesday
2. 5<sup>th</sup> Friday
3. 4<sup>th</sup> Saturday
4. 5<sup>th</sup> Thursday

Options :

5531722477. 1

5531722478. 2

5531722479. 3

5531722480. 4

Question Number : 121 Question Id : 553172635 Question Type : MCQ Option Shuffling : No Display Question Number : Yes  
Single Line Question Option : No Option Orientation : Vertical

Correct Marks : 4 Wrong Marks : 1

The second largest agro-based processing industry in India is

1. textile
2. sugar
3. citrus
4. spices

**Options :**

5531722481. 1

5531722482. 2

5531722483. 3

5531722484. 4

**Question Number : 122 Question Id : 553172636 Question Type : MCQ Option Shuffling : No Display Question Number : Yes Single Line Question Option : No Option Orientation : Vertical**

**Correct Marks : 4 Wrong Marks : 1**

Maximum sugar factories in India fall under

1. private sector
2. government sector
3. cooperative sector
4. None of the above

**Options :**

5531722485. 1

5531722486. 2

5531722487. 3

5531722488. 4

**Question Number : 123 Question Id : 553172637 Question Type : MCQ Option Shuffling : No Display Question Number : Yes Single Line Question Option : No Option Orientation : Vertical**

**Correct Marks : 4 Wrong Marks : 1**

Organic matter content in Indian soils is generally less than

1. 10%
2. 2%
3. 0.5%
4. 0.1%

**Options :**

5531722489. 1

5531722490. 2

5531722491. 3

5531722492. 4

**Question Number : 124 Question Id : 553172638 Question Type : MCQ Option Shuffling : No Display Question Number : Yes Single Line Question Option : No Option Orientation : Vertical**

**Correct Marks : 4 Wrong Marks : 1**

Highly salt tolerant fruit crop is

1. grapes
2. date palm
3. almond
4. leman

**Options :**

5531722493. 1

5531722494. 2

5531722495. 3

5531722496. 4

**Question Number : 125 Question Id : 553172639 Question Type : MCQ Option Shuffling : No Display Question Number : Yes Single Line Question Option : No Option Orientation : Vertical**

**Correct Marks : 4 Wrong Marks : 1**

Indian Institute of Vegetables Research is located at

1. Hyderabad, Telangana
2. Navsari, Gujarat
3. New Delhi
4. Varanasi, UP

**Options :**

5531722497. 1

5531722498. 2

5531722499. 3

5531722500. 4

**Question Number : 126 Question Id : 553172640 Question Type : MCQ Option Shuffling : No Display Question Number : Yes Single Line Question Option : No Option Orientation : Vertical**

**Correct Marks : 4 Wrong Marks : 1**

In terms of area, which vegetable is cultivated the most

1. onion
2. potato
3. tomato
4. okra

**Options :**

5531722501. 1

5531722502. 2

5531722503. 3

5531722504. 4

**Question Number : 127 Question Id : 553172641 Question Type : MCQ Option Shuffling : No Display Question Number : Yes Single Line Question Option : No Option Orientation : Vertical**

**Correct Marks : 4 Wrong Marks : 1**

Nearly fifty percent of the world production of Mango is from

1. Indonesia
2. China
3. India
4. Pakistan

**Options :**

5531722505. 1

5531722506. 2

5531722507. 3

5531722508. 4

**Question Number : 128 Question Id : 553172642 Question Type : MCQ Option Shuffling : No Display Question Number : Yes Single Line Question Option : No Option Orientation : Vertical**

**Correct Marks : 4 Wrong Marks : 1**

Demand for agricultural products is relatively

1. less elastic
2. more elastic
3. more inelastic
4. less inelastic

**Options :**

5531722509. 1

5531722510. 2

5531722511. 3

5531722512. 4

**Question Number : 129 Question Id : 553172643 Question Type : MCQ Option Shuffling : No Display Question Number : Yes Single Line Question Option : No Option Orientation : Vertical**

**Correct Marks : 4 Wrong Marks : 1**

The daily requirement of fruits per day per capita for an adult is

1. 300 grams
2. 24 grams
3. 92 grams
4. 120 grams

**Options :**

5531722513. 1

5531722514. 2

5531722515. 3

5531722516. 4

**Question Number : 130 Question Id : 553172644 Question Type : MCQ Option Shuffling : No Display Question Number : Yes Single Line Question Option : No Option Orientation : Vertical**

**Correct Marks : 4 Wrong Marks : 1**

Property that is pledged to secure a loan is

1. mortgage
2. chattel loan
3. personal security
4. collateral security

Options :

5531722517. 1

5531722518. 2

5531722519. 3

5531722520. 4

Question Number : 131 Question Id : 553172645 Question Type : MCQ Option Shuffling : No Display Question Number : Yes  
Single Line Question Option : No Option Orientation : Vertical

Correct Marks : 4 Wrong Marks : 1

Quantity purchased will vary inversely with price when income effect is \_\_\_\_\_ for normal goods.

1. zero
2. positive
3. negative
4. None of the above

Options :

5531722521. 1

5531722522. 2

5531722523. 3

5531722524. 4

Question Number : 132 Question Id : 553172646 Question Type : MCQ Option Shuffling : No Display Question Number : Yes  
Single Line Question Option : No Option Orientation : Vertical

Correct Marks : 4 Wrong Marks : 1

Which of the following is NOT correctly matched?

<b>Type of market</b>	<b>Basis of classification</b>
1. Unorganized market	Organisation
2. Regulated market	Control
3. Perfect market	Competition
4. Terminal market	Area

Options :

5531722525. 1

5531722526. 2

5531722527. 3

5531722528. 4

Question Number : 133 Question Id : 553172647 Question Type : MCQ Option Shuffling : No Display Question Number : Yes  
Single Line Question Option : No Option Orientation : Vertical

Correct Marks : 4 Wrong Marks : 1

The \_\_\_\_\_ of demand refers to the responsiveness of demand for a product to the change in the price of its substitutes and compliments.

1. advertisement elasticity
2. cross elasticity
3. price elasticity
4. income elasticity

**Options :**

5531722529. 1

5531722530. 2

5531722531. 3

5531722532. 4

**Question Number : 134 Question Id : 553172648 Question Type : MCQ Option Shuffling : No Display Question Number : Yes Single Line Question Option : No Option Orientation : Vertical**

**Correct Marks : 4 Wrong Marks : 1**

Goods for which, other things being equal, an increase in income leads to a decrease in demand is called

1. normal goods
2. inferior goods
3. complementary goods
4. substitute goods

**Options :**

5531722533. 1

5531722534. 2

5531722535. 3

5531722536. 4

**Question Number : 135 Question Id : 553172649 Question Type : MCQ Option Shuffling : No Display Question Number : Yes Single Line Question Option : No Option Orientation : Vertical**

**Correct Marks : 4 Wrong Marks : 1**

Which among the following is NOT correct?

1. Profit = TR – TC
2. Average total cost = TC/Q
3. Marginal cost =  $\Delta TC/\Delta Q$
4. Fixed cost =  $\Delta MC/\Delta MP$

**Options :**

5531722537. 1

5531722538. 2

5531722539. 3

5531722540. 4

**Question Number : 136 Question Id : 553172650 Question Type : MCQ Option Shuffling : No Display Question Number : Yes Single Line Question Option : No Option Orientation : Vertical**

**Correct Marks : 4 Wrong Marks : 1**



Cooperative marketing of agri-produce

1. substitutes collective bargaining for individual bargaining
2. supports individual bargaining
3. substitutes individual bargaining for collective bargaining
4. None of the above

**Options :**

5531722541. 1

5531722542. 2

5531722543. 3

5531722544. 4

**Question Number : 137 Question Id : 553172651 Question Type : MCQ Option Shuffling : No Display Question Number : Yes  
Single Line Question Option : No Option Orientation : Vertical**

**Correct Marks : 4 Wrong Marks : 1**

The head office of NAFED is located at

1. Mumbai
2. Calcutta
3. Chennai
4. Delhi

**Options :**

5531722545. 1

5531722546. 2

5531722547. 3

5531722548. 4

**Question Number : 138 Question Id : 553172652 Question Type : MCQ Option Shuffling : No Display Question Number : Yes  
Single Line Question Option : No Option Orientation : Vertical**

**Correct Marks : 4 Wrong Marks : 1**

The method which protects against the price fluctuations in marketing of commodities is

1. futures trading
2. voluntary trading
3. regulated trading
4. unregulated trading

**Options :**

5531722549. 1

5531722550. 2

5531722551. 3

5531722552. 4

**Question Number : 139 Question Id : 553172653 Question Type : MCQ Option Shuffling : No Display Question Number : Yes  
Single Line Question Option : No Option Orientation : Vertical**

**Correct Marks : 4 Wrong Marks : 1**

In a cooperative marketing society, number of votes of a member are dependent upon

1. number of shares purchased by him
2. amount of money invested by him
3. both 1 and 2
4. None of the above

**Options :**

- 5531722553. 1
- 5531722554. 2
- 5531722555. 3
- 5531722556. 4

**Question Number : 140 Question Id : 553172654 Question Type : MCQ Option Shuffling : No Display Question Number : Yes Single Line Question Option : No Option Orientation : Vertical**

**Correct Marks : 4 Wrong Marks : 1**

Which of the following is NOT correct with respect to the buffer stocks maintained by FCI?

1. To cushion the stocks of fluctuating supply and price
2. To meet the emergency needs
3. To meet the situation arising out of serious unexpected shortages
4. To encourage processing industry

**Options :**

- 5531722557. 1
- 5531722558. 2
- 5531722559. 3
- 5531722560. 4

**Question Number : 141 Question Id : 553172655 Question Type : MCQ Option Shuffling : No Display Question Number : Yes Single Line Question Option : No Option Orientation : Vertical**

**Correct Marks : 4 Wrong Marks : 1**

Pusa Baisakhi is popular variety of

1. green gram
2. red gram
3. wheat
4. jowar

**Options :**

- 5531722561. 1
- 5531722562. 2
- 5531722563. 3
- 5531722564. 4

**Question Number : 142 Question Id : 553172656 Question Type : MCQ Option Shuffling : No Display Question Number : Yes Single Line Question Option : No Option Orientation : Vertical**

**Correct Marks : 4 Wrong Marks : 1**

staple length of most varieties of cotton ranges between

1. 10 mm–15 mm
2. 22 mm–26 mm
3. 32 mm–46 mm
4. 50 mm–55 mm

**Options :**

5531722565. 1

5531722566. 2

5531722567. 3

5531722568. 4

**Question Number : 143 Question Id : 553172657 Question Type : MCQ Option Shuffling : No Display Question Number : Yes Single Line Question Option : No Option Orientation : Vertical**

**Correct Marks : 4 Wrong Marks : 1**

The use of tractor is considered economical when it is utilized for

1. 800 hrs/year
2. 1000 hrs/year
3. 1200 hrs/year
4. 1400 hrs/year

**Options :**

5531722569. 1

5531722570. 2

5531722571. 3

5531722572. 4

**Question Number : 144 Question Id : 553172658 Question Type : MCQ Option Shuffling : No Display Question Number : Yes Single Line Question Option : No Option Orientation : Vertical**

**Correct Marks : 4 Wrong Marks : 1**

The smallest size of economical gobar gas plant is

1. 30 cu.ft.
2. 70 cu.ft.
3. 120 cu.ft.
4. 150 cu.ft.

**Options :**

5531722573. 1

5531722574. 2

5531722575. 3

5531722576. 4

**Question Number : 145 Question Id : 553172659 Question Type : MCQ Option Shuffling : No Display Question Number : Yes Single Line Question Option : No Option Orientation : Vertical**

**Correct Marks : 4 Wrong Marks : 1**

According to Occupational Safety and Health Act, a worker should not be exposed to 90 dB for more than

1. 15 min
2. 1 hour
3. 4 hours
4. 8 hours

Options :

5531722577. 1

5531722578. 2

5531722579. 3

5531722580. 4

Question Number : 146 Question Id : 553172660 Question Type : MCQ Option Shuffling : No Display Question Number : Yes  
Single Line Question Option : No Option Orientation : Vertical

Correct Marks : 4 Wrong Marks : 1

Main combustible constituent of biogas is

1. methane
2. ethane
3. butane
4. carbon dioxide

Options :

5531722581. 1

5531722582. 2

5531722583. 3

5531722584. 4

Question Number : 147 Question Id : 553172661 Question Type : MCQ Option Shuffling : No Display Question Number : Yes  
Single Line Question Option : No Option Orientation : Vertical

Correct Marks : 4 Wrong Marks : 1

Nutritionally, egg is a rich source of

1. protein
2. Fe and P
3. unsaturated fatty acid
4. All of the above

Options :

5531722585. 1

5531722586. 2

5531722587. 3

5531722588. 4

Question Number : 148 Question Id : 553172662 Question Type : MCQ Option Shuffling : No Display Question Number : Yes  
Single Line Question Option : No Option Orientation : Vertical

Correct Marks : 4 Wrong Marks : 1

Antibiotics are products of

1. bacteria and fungi
2. fungi and parasites
3. parasites and bacteria
4. fungi and viruses

Options :

5531722589. 1

5531722590. 2

5531722591. 3

5531722592. 4

Question Number : 149 Question Id : 553172663 Question Type : MCQ Option Shuffling : No Display Question Number : Yes  
Single Line Question Option : No Option Orientation : Vertical

Correct Marks : 4 Wrong Marks : 1

"Let down of milk" is initiated by the hormone

1. prolactin
2. lactogen
3. oxytocin
4. lactopoietin

Options :

5531722593. 1

5531722594. 2

5531722595. 3

5531722596. 4

Question Number : 150 Question Id : 553172664 Question Type : MCQ Option Shuffling : No Display Question Number : Yes  
Single Line Question Option : No Option Orientation : Vertical

Correct Marks : 4 Wrong Marks : 1

Which of the following is not a legume fodder?

1. Sun-hemp
2. Stylo hamata
3. Oat
4. Lucena

Options :

5531722597. 1

5531722598. 2

5531722599. 3

5531722600. 4

Question Number : 151 Question Id : 553172665 Question Type : MCQ Option Shuffling : No Display Question Number : Yes  
Single Line Question Option : No Option Orientation : Vertical

Correct Marks : 4 Wrong Marks : 1

The range of multiple correlation coefficient lies between

1. 0 to +1
2. -1 to +1
3. 0 to  $\infty$
4.  $-\infty$  to  $\infty$

Options :

5531722601. 1

5531722602. 2

5531722603. 3

5531722604. 4

Question Number : 152 Question Id : 553172666 Question Type : MCQ Option Shuffling : No Display Question Number : Yes  
Single Line Question Option : No Option Orientation : Vertical

Correct Marks : 4 Wrong Marks : 1

The principle of making use of greater homogeneity in groups of experimental units to reduce the experimental error is referred as

1. replication
2. randomization
3. local control
4. sampling

Options :

5531722605. 1

5531722606. 2

5531722607. 3

5531722608. 4

Question Number : 153 Question Id : 553172667 Question Type : MCQ Option Shuffling : No Display Question Number : Yes  
Single Line Question Option : No Option Orientation : Vertical

Correct Marks : 4 Wrong Marks : 1

The plant growth hormone which helps in enlarging the grape fruit is

1. abscisic acid
2. gibberellic acid
3. cytokinins
4. ethylene

Options :

5531722609. 1

5531722610. 2

5531722611. 3

5531722612. 4

Question Number : 154 Question Id : 553172668 Question Type : MCQ Option Shuffling : No Display Question Number : Yes  
Single Line Question Option : No Option Orientation : Vertical

Correct Marks : 4 Wrong Marks : 1



The leading Indian state in floriculture trade is

1. Uttar Pradesh
2. Punjab
3. Karnataka
4. Jharkhand

Options :

5531722613. 1

5531722614. 2

5531722615. 3

5531722616. 4

Question Number : 155 Question Id : 553172669 Question Type : MCQ Option Shuffling : No Display Question Number : Yes  
Single Line Question Option : No Option Orientation : Vertical

Correct Marks : 4 Wrong Marks : 1

The \_\_\_\_\_ helps to maintain a constant body temperature in our body

1. roughage
2. vitamins
3. energy giving foods
4. water

Options :

5531722617. 1

5531722618. 2

5531722619. 3

5531722620. 4

Question Number : 156 Question Id : 553172670 Question Type : MCQ Option Shuffling : No Display Question Number : Yes  
Single Line Question Option : No Option Orientation : Vertical

Correct Marks : 4 Wrong Marks : 1

Which among the following is NOT an entrepreneurial attribute?

1. Perseverance
2. Creativity
3. Determination
4. Arrogance

Options :

5531722621. 1

5531722622. 2

5531722623. 3

5531722624. 4

Question Number : 157 Question Id : 553172671 Question Type : MCQ Option Shuffling : No Display Question Number : Yes  
Single Line Question Option : No Option Orientation : Vertical

Correct Marks : 4 Wrong Marks : 1

Which state's chief minister has launched zero budget natural farming project?

1. Uttarakhand
2. Odisha
3. Telangana
4. Himachal Pradesh

Options :

5531722625. 1

5531722626. 2

5531722627. 3

5531722628. 4

Question Number : 158 Question Id : 553172672 Question Type : MCQ Option Shuffling : No Display Question Number : Yes  
Single Line Question Option : No Option Orientation : Vertical

Correct Marks : 4 Wrong Marks : 1

Which of the following has been declared as Kerala's official fruit?

1. Coconut
2. Jackfruit
3. Banana
4. Tapioca

Options :

5531722629. 1

5531722630. 2

5531722631. 3

5531722632. 4

Question Number : 159 Question Id : 553172673 Question Type : MCQ Option Shuffling : No Display Question Number : Yes  
Single Line Question Option : No Option Orientation : Vertical

Correct Marks : 4 Wrong Marks : 1

Under Merchandise Exports from India Scheme (MEIS), how much subsidy will be given to non-basmati rice exporters?

1. 5%
2. 4%
3. 6%
4. 3%

Options :

5531722633. 1

5531722634. 2

5531722635. 3

5531722636. 4

Question Number : 160 Question Id : 553172674 Question Type : MCQ Option Shuffling : No Display Question Number : Yes  
Single Line Question Option : No Option Orientation : Vertical

Correct Marks : 4 Wrong Marks : 1

Women's contribution to agriculture, whether it be subsistence farming or commercial agriculture, when measured in terms of the number of tasks performed and time spent is

1. equal to men
2. greater than men
3. less than men
4. None of the above

**Options :**

5531722637. 1

5531722638. 2

5531722639. 3

5531722640. 4