

National Testing Agency

Question Paper Name :	General Eng 08th June 2023 Shift 3
Subject Name :	General Eng
Creation Date :	2023-06-09 11:47:49
Duration :	120
Total Marks :	400
Display Marks:	Yes

General

Group Number :	1
Group Id :	92090693
Group Maximum Duration :	0
Group Minimum Duration :	120
Show Attended Group? :	No
Edit Attended Group? :	No
Break time :	0
Group Marks :	400
Is this Group for Examiner? :	No
Examiner permission :	Cant View
Show Progress Bar? :	No

Part A

Section Id :	920906185
Section Number :	1
Section type :	Online
Mandatory or Optional :	Mandatory
Number of Questions :	17
Number of Questions to be attempted :	17
Section Marks :	80
Enable Mark as Answered Mark for Review and Clear Response :	Yes
Maximum Instruction Time :	0
Sub-Section Number :	1
Sub-Section Id :	920906301
Question Shuffling Allowed :	Yes
Is Section Default? :	null

Question Number : 1 Question Id : 9209069315 Question Type : MCQ Option Shuffling : No Is Question Mandatory : No Calculator : None Response Time : N.A Think Time : N.A Minimum Instruction Time : 0

Correct Marks : 4 Wrong Marks : 1

Match List I with List II :

List I	List II
(A) According to the rules, nobody is allowed in without a ticket	(I) Financially
(B) In terms of profit we made, the festival was a great success.	(II) Realistically
(C) In terms of what we can actually achieve, 80 percent is probably maximum.	(III) socially
(D) For the good of society this legislation will bring considerable relief	(IV) Officially

Choose the correct answer from the options given below :

- (1) (A)-(II), (B)-(III), (C)-(I), (D)-(IV)
- (2) (A)-(IV), (B)-(I), (C)-(II), (D)-(III)
- (3) (A)-(III), (B)-(IV), (C)-(I), (D)-(II)
- (4) (A)-(I), (B)-(II), (C)-(IV), (D)-(III)

Options :

92090636801. 1
92090636802. 2
92090636803. 3
92090636804. 4

Question Number : 1 Question Id : 9209069315 Question Type : MCQ Option Shuffling : No Is Question Mandatory : No Calculator : None Response Time : N.A Think Time : N.A Minimum Instruction Time : 0

Correct Marks : 4 Wrong Marks : 1

Match List I with List II :

List I	List II
(A) According to the rules, nobody is allowed in without a ticket	(I) Financially
(B) In terms of profit we made, the festival was a great success.	(II) Realistically
(C) In terms of what we can actually achieve, 80 percent is probably maximum.	(III) socially
(D) For the good of society this legislation will bring considerable relief	(IV) Officially

Choose the correct answer from the options given below :

- (1) (A)-(II), (B)-(III), (C)-(I), (D)-(IV)
- (2) (A)-(IV), (B)-(I), (C)-(II), (D)-(III)
- (3) (A)-(III), (B)-(IV), (C)-(I), (D)-(II)
- (4) (A)-(I), (B)-(II), (C)-(IV), (D)-(III)

Options :

- 92090636801. 1
- 92090636802. 2
- 92090636803. 3
- 92090636804. 4

Question Number : 2 Question Id : 9209069316 Question Type : MCQ Option Shuffling : No Is Question Mandatory : No Calculator : None Response Time : N.A Think Time : N.A Minimum Instruction Time : 0

Correct Marks : 4 Wrong Marks : 1

Match List I with List II :

- | List I | List II |
|--|------------------|
| (A) She is interested in anything _____ street children. | (I) following |
| (B) _____ his dancing skills, he put up a decent performance | (II) regarding |
| (C) The puppy kept _____ him all the way to the market and back | (III) concerning |
| (D) The Principal has called her to his chamber _____ her low attendance | (IV) considering |

Choose the correct answer from the options given below :

- (1) (A)-(II), (B)-(III), (C)-(IV), (D)-(I)
- (2) (A)-(III), (B)-(IV), (C)-(I), (D)-(II)
- (3) (A)-(I), (B)-(II), (C)-(III), (D)-(IV)
- (4) (A)-(IV), (B)-(I), (C)-(II), (D)-(III)

Options :

92090636805. 1

92090636806. 2

92090636807. 3

92090636808. 4

Question Number : 2 Question Id : 9209069316 Question Type : MCQ Option Shuffling : No Is Question Mandatory : No Calculator : None Response Time : N.A Think Time : N.A Minimum Instruction Time : 0

Correct Marks : 4 Wrong Marks : 1

Match List I with List II :

- | List I | List II |
|--|------------------|
| (A) She is interested in anything _____ street children. | (I) following |
| (B) _____ his dancing skills, he put up a decent performance | (II) regarding |
| (C) The puppy kept _____ him all the way to the market and back | (III) concerning |
| (D) The Principal has called her to his chamber _____ her low attendance | (IV) considering |

Choose the correct answer from the options given below :

- (1) (A)-(II), (B)-(III), (C)-(IV), (D)-(I)
- (2) (A)-(III), (B)-(IV), (C)-(I), (D)-(II)
- (3) (A)-(I), (B)-(II), (C)-(III), (D)-(IV)
- (4) (A)-(IV), (B)-(I), (C)-(II), (D)-(III)

Options :

- 92090636805. 1
- 92090636806. 2
- 92090636807. 3
- 92090636808. 4

Question Number : 3 Question Id : 9209069317 Question Type : MCQ Option Shuffling : No Is Question Mandatory : No Calculator : None Response Time : N.A Think Time : N.A Minimum Instruction Time : 0

Correct Marks : 4 Wrong Marks : 1

Choose the correct spellings of the following words

- (A) Accomodation
- (B) Accommodation
- (C) Committed
- (D) Comitted

Choose the correct answer from the options given below :

- (1) (A), (C) only
- (2) (B), (C) only
- (3) (A), (D) only
- (4) (B), (D) only

Options :

- 92090636809. 1
- 92090636810. 2
- 92090636811. 3
- 92090636812. 4

Question Number : 3 Question Id : 9209069317 Question Type : MCQ Option Shuffling : No Is Question Mandatory : No Calculator : None Response Time : N.A Think Time : N.A Minimum Instruction Time : 0

Correct Marks : 4 Wrong Marks : 1

Choose the correct spellings of the following words

- (A) Accomodation
- (B) Accommodation
- (C) Committed
- (D) Comitted

Choose the correct answer from the options given below :

- (1) (A), (C) only
- (2) (B), (C) only
- (3) (A), (D) only
- (4) (B), (D) only

Options :

- 92090636809. 1
- 92090636810. 2
- 92090636811. 3
- 92090636812. 4

Question Number : 4 Question Id : 9209069318 Question Type : MCQ Option Shuffling : No Is Question Mandatory : No Calculator : None Response Time : N.A Think Time : N.A Minimum Instruction Time : 0

Correct Marks : 4 Wrong Marks : 1

Choose the word spelt correctly

- (1) Exaggarate
- (2) Exaggerate
- (3) Exeggerete
- (4) Exeggerate

Options :

- 92090636813. 1
- 92090636814. 2
- 92090636815. 3
- 92090636816. 4

Question Number : 4 Question Id : 9209069318 Question Type : MCQ Option Shuffling : No Is Question Mandatory : No Calculator : None Response Time : N.A Think Time : N.A Minimum Instruction Time : 0

Correct Marks : 4 Wrong Marks : 1

Choose the word spelt correctly

- (1) Exaggarate (2) Exaggerate
(3) Exeggerete (4) Exeggarate

Options :

92090636813. 1
92090636814. 2
92090636815. 3
92090636816. 4

Question Number : 5 Question Id : 9209069319 Question Type : MCQ Option Shuffling : No Is Question Mandatory : No Calculator : None Response Time : N.A Think Time : N.A Minimum Instruction Time : 0

Correct Marks : 4 Wrong Marks : 1

Rearrange the given sentences into a meaningful paragraph.

- (A) Deals with fiction, not with fact
(B) But to please his imagination
(C) Imaginative composition differs from other forms of writing since it
(D) Its aim is not to instruct the mind of the reader

Choose the correct answer from the options given below :

- (1) (C), (B), (A), (D)
(2) (D), (B), (C), (A)
(3) (C), (A), (D), (B)
(4) (B), (A), (D), (C)

Options :

92090636817. 1
92090636818. 2
92090636819. 3
92090636820. 4

Question Number : 5 Question Id : 9209069319 Question Type : MCQ Option Shuffling : No Is Question Mandatory : No Calculator : None Response Time : N.A Think Time : N.A Minimum Instruction Time : 0

Correct Marks : 4 Wrong Marks : 1

Rearrange the given sentences into a meaningful paragraph.

- (A) Deals with fiction, not with fact
- (B) But to please his imagination
- (C) Imaginative composition differs from other forms of writing since it
- (D) Its aim is not to instruct the mind of the reader

Choose the correct answer from the options given below :

- (1) (C), (B), (A), (D)
- (2) (D), (B), (C), (A)
- (3) (C), (A), (D), (B)
- (4) (B), (A), (D), (C)

Options :

- 92090636817. 1
- 92090636818. 2
- 92090636819. 3
- 92090636820. 4

Question Number : 6 Question Id : 9209069320 Question Type : MCQ Option Shuffling : No Is Question Mandatory : No Calculator : None Response Time : N.A Think Time : N.A Minimum Instruction Time : 0

Correct Marks : 4 Wrong Marks : 1

Rearrange the given sentences into a meaningful paragraph:

- (A) By means of words and leading him to do
- (B) The typical form of this kind of composition is that of a speech or sermon addressed to an audience.
- (C) Persuasion is the art of influencing the will of another
- (D) Some particular act advocated by the speaker or writer

Choose the correct answer from the options given below :

- (1) (C), (A), (D), (B)
- (2) (B), (A), (D), (C)
- (3) (D), (A), (B), (C)
- (4) (D), (B), (A), (C)

Options :

- 92090636821. 1
- 92090636822. 2
- 92090636823. 3
- 92090636824. 4

Question Number : 6 Question Id : 9209069320 Question Type : MCQ Option Shuffling : No Is Question Mandatory : No Calculator : None Response Time : N.A Think Time : N.A Minimum Instruction Time : 0

Correct Marks : 4 Wrong Marks : 1

Rearrange the given sentences into a meaningful paragraph:

- (A) By means of words and leading him to do
- (B) The typical form of this kind of composition is that of a speech or sermon addressed to an audience.
- (C) Persuasion is the art of influencing the will of another
- (D) Some particular act advocated by the speaker or writer

Choose the correct answer from the options given below :

- (1) (C), (A), (D), (B)
- (2) (B), (A), (D), (C)
- (3) (D), (A), (B), (C)
- (4) (D), (B), (A), (C)

Options :

- 92090636821. 1
- 92090636822. 2
- 92090636823. 3
- 92090636824. 4

Question Number : 7 Question Id : 9209069321 Question Type : MCQ Option Shuffling : No Is Question Mandatory : No Calculator : None Response Time : N.A Think Time : N.A Minimum Instruction Time : 0

Correct Marks : 4 Wrong Marks : 1

Replace the underlined part with the correct option:

Had he worked hard for the tournament, he had aced the match.

- (1) He was aced
- (2) He should aced
- (3) He should have aced
- (4) He would have aced

Options :

- 92090636825. 1
- 92090636826. 2
- 92090636827. 3
- 92090636828. 4

Question Number : 7 Question Id : 9209069321 Question Type : MCQ Option Shuffling : No Is Question Mandatory : No Calculator : None Response Time : N.A Think Time : N.A Minimum Instruction Time : 0

Correct Marks : 4 Wrong Marks : 1

Replace the underlined part with the correct option:

Had he worked hard for the tournament, he had aced the match.

- (1) He was aced (2) He should aced
(3) He should have aced (4) He would have aced

Options :

92090636825. 1
92090636826. 2
92090636827. 3
92090636828. 4

Question Number : 8 Question Id : 9209069322 Question Type : MCQ Option Shuffling : No Is Question Mandatory : No Calculator : None Response Time : N.A Think Time : N.A Minimum Instruction Time : 0

Correct Marks : 4 Wrong Marks : 1

Replace the underlined part with the correct option:

The Board is favouring towards signing of the contract with the newly launched technology company.

- (1) Was favourable in (2) as a favour will
(3) is in favour of (4) has been favoured to

Options :

92090636829. 1
92090636830. 2
92090636831. 3
92090636832. 4

Question Number : 8 Question Id : 9209069322 Question Type : MCQ Option Shuffling : No Is Question Mandatory : No Calculator : None Response Time : N.A Think Time : N.A Minimum Instruction Time : 0

Correct Marks : 4 Wrong Marks : 1

Replace the underlined part with the correct option:

The Board is favouring towards signing of the contract with the newly launched technology company.

- (1) Was favourable in (2) as a favour will
(3) is in favour of (4) has been favoured to

Options :

92090636829. 1
92090636830. 2
92090636831. 3
92090636832. 4

Question Number : 9 Question Id : 9209069323 Question Type : MCQ Option Shuffling : No Is Question Mandatory : No Calculator : None Response Time : N.A Think Time : N.A Minimum Instruction Time : 0

Correct Marks : 4 Wrong Marks : 1

Match List I with List II :

- | List I | List II |
|---|-----------|
| (A) Are most people resistant__advice on healthy eating | (I) of |
| (B) Do people in your country generally have an aptitude __ languages | (II) to |
| (C) Do many people embark __ a new career in middle age | (III) for |
| (D) The fear ____ missing out can help you to remain enthusiastic | (IV) on |

Choose the correct answer from the options given below :

- (1) (A)-(III), (B)-(IV), (C)-(II), (D)-(I)
(2) (A)-(II), (B)-(III), (C)-(IV), (D)-(I)
(3) (A)-(IV), (B)-(II), (C)-(III), (D)-(I)
(4) (A)-(I), (B)-(IV), (C)-(II), (D)-(III)

Options :

92090636833. 1
92090636834. 2
92090636835. 3
92090636836. 4

Question Number : 9 Question Id : 9209069323 Question Type : MCQ Option Shuffling : No Is Question Mandatory : No Calculator : None Response Time : N.A Think Time : N.A Minimum

Instruction Time : 0

Correct Marks : 4 Wrong Marks : 1

Match List I with List II :

- | List I | List II |
|--|-----------|
| (A) Are most people resistant ___ advice on healthy eating | (I) of |
| (B) Do people in your country generally have an aptitude ___ languages | (II) to |
| (C) Do many people embark ___ a new career in middle age | (III) for |
| (D) The fear ___ missing out can help you to remain enthusiastic | (IV) on |

Choose the correct answer from the options given below :

- (1) (A)-(III), (B)-(IV), (C)-(II), (D)-(I)
- (2) (A)-(II), (B)-(III), (C)-(IV), (D)-(I)
- (3) (A)-(IV), (B)-(II), (C)-(III), (D)-(I)
- (4) (A)-(I), (B)-(IV), (C)-(II), (D)-(III)

Options :

92090636833. 1

92090636834. 2

92090636835. 3

92090636836. 4

Question Number : 10 Question Id : 9209069324 Question Type : MCQ Option Shuffling : No Is Question Mandatory : No Calculator : None Response Time : N.A Think Time : N.A Minimum Instruction Time : 0

Correct Marks : 4 Wrong Marks : 1

Match List I with List II :

- | List I
(Sentences) | List II
(Adjectives) |
|---|-------------------------|
| (A) They have proved that the doctors were ___ in the diagnosis of the illness. | (I) Exhaustive |
| (B) The damage was _____ | (II) Exhausted |
| (C) He was ___ after the run. | (III) Negligent |
| (D) It's an ___ investigation. | (IV) Negligible |

Choose the correct answer from the options given below :

- (1) (A)-(III), (B)-(I), (C)-(IV), (D)-(II)
- (2) (A)-(II), (B)-(I), (C)-(III), (D)-(IV)
- (3) (A)-(I), (B)-(IV), (C)-(III), (D)-(II)
- (4) (A)-(III), (B)-(IV), (C)-(II), (D)-(I)

Options :

- 92090636837. 1
- 92090636838. 2
- 92090636839. 3
- 92090636840. 4

Question Number : 10 Question Id : 9209069324 Question Type : MCQ Option Shuffling : No Is Question Mandatory : No Calculator : None Response Time : N.A Think Time : N.A Minimum Instruction Time : 0

Correct Marks : 4 Wrong Marks : 1

Match List I with List II :

List I (Sentences)	List II (Adjectives)
(A) They have proved that the doctors were ____ in the diagnosis of the illness.	(I) Exhaustive
(B) The damage was _____	(II) Exhausted
(C) He was ___ after the run.	(III) Negligent
(D) It's an___investigation.	(IV) Negligible

Choose the correct answer from the options given below :

- (1) (A)-(III), (B)-(I), (C)-(IV), (D)-(II)
- (2) (A)-(II), (B)-(I), (C)-(III), (D)-(IV)
- (3) (A)-(I), (B)-(IV), (C)-(III), (D)-(II)
- (4) (A)-(III), (B)-(IV), (C)-(II), (D)-(I)

Options :

- 92090636837. 1
- 92090636838. 2
- 92090636839. 3
- 92090636840. 4

Sub-Section Number : 2
Sub-Section Id : 920906302
Question Shuffling Allowed : No
Is Section Default? : null

Question Id : 9209069325 Question Type : COMPREHENSION Sub Question Shuffling Allowed : Yes Group Comprehension Questions : No Question Pattern Type : NonMatrix Calculator : None Response Time : N.A Think Time : N.A Minimum Instruction Time : 0

Question Numbers : (11 to 14)

Question Label : Comprehension

Read the given passage and answer the questions that follows: (11-14)

Crypto detectives are cleaning up by cracking down

Before a new breed of cryptocurrency detectives helped bring him down, Ryan Felton marketed his crypto scheme with a grandiose promise: He was creating “Netflix on the blockchain.”

He called the crypto-themed streaming service FLiK. For a small amount of the popular digital currency ether, customers could purchase a FLiK token, which would give them access to shows and movies broadcast on the new platform. Felton described the project as an “entertainment revolution”; crypto enthusiasts bought more than \$2 million worth of FLiK coins. But the streaming business never materialized. Instead, Felton bought a \$1.5 million house, along with \$32,000 in diamonds. He spent \$180,000 more for a red Ferrari.

When cryptocurrencies hit the mainstream in the 2010s, the technology was widely viewed as a perfect vehicle for crime. A drug dealer or scamster could transfer large quantities of money without having a bank to validate the transaction. To early advocates, crypto was appealing because it promised the secrecy and anonymity of cash, without the inconvenience of face-to-face exchanges.

That secrecy was an illusion. Crypto transactions are inscribed on a publicly viewable ledger called a blockchain. To the untrained observer, blockchain records are unintelligible – a jumble of meaningless letters and numbers. But a growth industry is dedicated to deciphering them. At the centre is the New York analytics startup Chainalysis, valued at \$8.6 billion after its latest funding. With tens of millions of dollars in federal contracts, Chainalysis has built a reputation as one of the crypto industry’s leading detectives—a team of blockchain analysts that helps the government track transactions.

As US federal agencies orchestrate an aggressive crack-down on crypto fraud, Chainalysis has come to occupy an increasingly important position in the industry. The company markets itself to the government and private companies as a force for good in a badly behaved sector – a firm whose business is solving crimes and cooperating with public officials. After the FTX exchange imploded, its bankruptcy lawyers hired Chainalysis to disentangle the web of entities at the center of Sam Bankman-Fried’s empire and track the \$400 million in crypto that a hacker stole from FTX. Chainalysis has also been conducting some light diplomacy: In April, it hosted a conference to bring together government officials and the newly chastened crypto executives who are trying to win back trust. Guests received socks stitched with the Chainalysis logo.

But the ambassadorial role has put Chainalysis at odds with some of crypto’s passionate advocates, who envisioned digital money as a private, anonymous financial network. That clash also reflects a battle for crypto’s future.

From the government’s perspective, Chainalysis is arguably the most trusted company in the industry—but only because it sells powerful tools aimed at penetrating the veil of secrecy that made crypto attractive in the first place.

The blockchain is “often-times the key to unlocking a case,” said Jonathan of Chainalysis. “It’s more traceable and more conclusive.”

In late 2020, Felton was indicted on charges that he had used investor’s funds to finance his extravagant life-style. He went on trial in Atlanta last summer. Testifying for the prosecution was Beth Bisbee, a Chainalysis investigator who once worked for the Drug Enforcement Administration. In 2014, her analysis of blockchain records helped the DEA track down an internet drug dealer in Arizona.

Sub questions

Question Number : 11 Question Id : 9209069326 Question Type : MCQ Option Shuffling : No Is Question Mandatory : No Calculator : None Response Time : N.A Think Time : N.A Minimum Instruction Time : 0

Correct Marks : 4 Wrong Marks : 1

Which project did Felton describe as an “entertainment revolution”

Choose your answer from the options given below:

- (A) The business of streaming
- (B) Felton bought a dollar 1.5 million house
- (C) For a small amount of digital currency customers could access shows and movies broadcast on the new platform.
- (D) The creation of Netflix on the blockchain

Choose the correct answer from the options given below :

- (1) (A), (B), (C) only
- (2) (A), (B) only
- (3) (C), (D) only
- (4) (B), (D) only

Options :

- 92090636841. 1
- 92090636842. 2
- 92090636843. 3
- 92090636844. 4

Question Number : 12 Question Id : 9209069327 Question Type : MCQ Option Shuffling : No Is Question Mandatory : No Calculator : None Response Time : N.A Think Time : N.A Minimum Instruction Time : 0

Correct Marks : 4 Wrong Marks : 1

Match the phrases in List I with meanings of List II :

- | List I | List II |
|--|---|
| (A) Business <u>never materialized</u> | (I) Reach more people |
| (B) Hit the mainstream | (II) Gain the confidence of others once again |
| (C) Win back trust | (III) Unravelling the real story behind it |
| (D) Penetrating the veil of secrecy | (IV) Not to be successful |

Choose the correct answer from the options given below :

- (1) (A)-(IV), (B)-(I), (C)-(II), (D)-(III)
- (2) (A)-(III), (B)-(II), (C)-(I), (D)-(IV)
- (3) (A)-(I), (B)-(III), (C)-(IV), (D)-(II)
- (4) (A)-(II), (B)-(III), (C)-(I), (D)-(IV)

Options :

- 92090636845. 1
- 92090636846. 2

92090636847. 3

92090636848. 4

Question Number : 13 Question Id : 9209069328 Question Type : MCQ Option Shuffling : No Is Question Mandatory : No Calculator : None Response Time : N.A Think Time : N.A Minimum Instruction Time : 0

Correct Marks : 4 Wrong Marks : 1

Match the names with their List I with List II :

List I	List II
(A) Ryan Felton	(I) New York analytics startup
(B) Chainalysis	(II) The man who marketed the crypto scheme
(C) Sam Bankman Frier	(III) One of the founder's of Chainalysis
(D) Jonathan Levin	(IV) The head whose firm lost 400 million dollars

Choose the correct answer from the options given below :

- (1) (A)-(I), (B)-(III), (C)-(IV), (D)-(II)
- (2) (A)-(II), (B)-(I), (C)-(III), (D)-(IV)
- (3) (A)-(II), (B)-(I), (C)-(IV), (D)-(III)
- (4) (A)-(III), (B)-(II), (C)-(IV), (D)-(I)

Options :

92090636849. 1

92090636850. 2

92090636851. 3

92090636852. 4

Question Number : 14 Question Id : 9209069329 Question Type : MCQ Option Shuffling : No Is Question Mandatory : No Calculator : None Response Time : N.A Think Time : N.A Minimum Instruction Time : 0

Correct Marks : 4 Wrong Marks : 1

Compare the sentences in List I with suitable propositions from List II :

- | List I | List II |
|---|------------|
| (A) In your country are children largely subservient ___ their parents. | (I) for |
| (B) Do most drivers show a total disregard __ the speed limit | (II) on |
| (C) What would you like to see a ban __ in your country | (III) over |
| (D) Do parents usually have a firm control ___ their teenagers. | (IV) to |

Choose the correct answer from the options given below :

- (1) (A)-(III), (B)-(I), (C)-(IV), (D)-(II)
- (2) (A)-(II), (B)-(III), (C)-(I), (D)-(IV)
- (3) (A)-(I), (B)-(III), (C)-(IV), (D)-(II)
- (4) (A)-(IV), (B)-(I), (C)-(II), (D)-(III)

Options :

92090636853. 1
92090636854. 2
92090636855. 3
92090636856. 4

Question Id : 9209069325 Question Type : COMPREHENSION Sub Question Shuffling Allowed : Yes Group Comprehension Questions : No Question Pattern Type : NonMatrix Calculator : None Response Time : N.A Think Time : N.A Minimum Instruction Time : 0

Question Numbers : (11 to 14)

Question Label : Comprehension

Read the given passage and answer the questions that follows: (11-14)

Crypto detectives are cleaning up by cracking down

Before a new breed of cryptocurrency detectives helped bring him down, Ryan Felton marketed his crypto scheme with a grandiose promise: He was creating “Netflix on the blockchain.”

He called the crypto-themed streaming service FLiK. For a small amount of the popular digital currency ether, customers could purchase a FLiK token, which would give them access to shows and movies broadcast on the new platform. Felton described the project as an “entertainment revolution”; crypto enthusiasts bought more than \$2 million worth of FLiK coins. But the streaming business never materialized. Instead, Felton bought a \$1.5 million house, along with \$32,000 in diamonds. He spent \$180,000 more for a red Ferrari.

When cryptocurrencies hit the mainstream in the 2010s, the technology was widely viewed as a perfect vehicle for crime. A drug dealer or scamster could transfer large quantities of money without having a bank to validate the transaction. To early advocates, crypto was appealing because it promised the secrecy and anonymity of cash, without the inconvenience of face-to-face exchanges.

That secrecy was an illusion. Crypto transactions are inscribed on a publicly viewable ledger called a blockchain. To the untrained observer, blockchain records are unintelligible – a jumble of meaningless letters and numbers. But a growth industry is dedicated to deciphering them. At the centre is the New York analytics startup Chainalysis, valued at \$8.6 billion after its latest funding. With tens of millions of dollars in federal contracts, Chainalysis has built a reputation as one of the crypto industry’s leading detectives—a team of blockchain analysts that helps the government track transactions.

As US federal agencies orchestrate an aggressive crack-down on crypto fraud, Chainalysis has come to occupy an increasingly important position in the industry. The company markets itself to the government and private companies as a force for good in a badly behaved sector – a firm whose business is solving crimes and cooperating with public officials. After the FTX exchange imploded, its bankruptcy lawyers hired Chainalysis to disentangle the web of entities at the center of Sam Bankman-Fried’s empire and track the \$400 million in crypto that a hacker stole from FTX. Chainalysis has also been conducting some light diplomacy: In April, it hosted a conference to bring together government officials and the newly chastened crypto executives who are trying to win back trust. Guests received socks stitched with the Chainalysis logo.

But the ambassadorial role has put Chainalysis at odds with some of crypto’s passionate advocates, who envisioned digital money as a private, anonymous financial network. That clash also reflects a battle for crypto’s future.

From the government’s perspective, Chainalysis is arguably the most trusted company in the industry—but only because it sells powerful tools aimed at penetrating the veil of secrecy that made crypto attractive in the first place.

The blockchain is “often-times the key to unlocking a case,” said Jonathan of Chainalysis. “It’s more traceable and more conclusive.”

In late 2020, Felton was indicted on charges that he had used investor’s funds to finance his extravagant life-style. He went on trial in Atlanta last summer. Testifying for the prosecution was Beth Bisbee, a Chainalysis investigator who once worked for the Drug Enforcement Administration. In 2014, her analysis of blockchain records helped the DEA track down an internet drug dealer in Arizona.

Sub questions

Question Number : 11 Question Id : 9209069326 Question Type : MCQ Option Shuffling : No Is Question Mandatory : No Calculator : None Response Time : N.A Think Time : N.A Minimum Instruction Time : 0

Correct Marks : 4 Wrong Marks : 1

Which project did Felton describe as an “entertainment revolution”

Choose your answer from the options given below:

- (A) The business of streaming
- (B) Felton bought a dollar 1.5 million house
- (C) For a small amount of digital currency customers could access shows and movies broadcast on the new platform.
- (D) The creation of Netflix on the blockchain

Choose the correct answer from the options given below :

- (1) (A), (B), (C) only
- (2) (A), (B) only
- (3) (C), (D) only
- (4) (B), (D) only

Options :

- 92090636841. 1
- 92090636842. 2
- 92090636843. 3
- 92090636844. 4

Question Number : 12 Question Id : 9209069327 Question Type : MCQ Option Shuffling : No Is Question Mandatory : No Calculator : None Response Time : N.A Think Time : N.A Minimum Instruction Time : 0

Correct Marks : 4 Wrong Marks : 1

Match the phrases in List I with meanings of List II :

- | List I | List II |
|--|---|
| (A) Business <u>never materialized</u> | (I) Reach more people |
| (B) Hit the mainstream | (II) Gain the confidence of others once again |
| (C) Win back trust | (III) Unravelling the real story behind it |
| (D) Penetrating the veil of secrecy | (IV) Not to be successful |

Choose the correct answer from the options given below :

- (1) (A)-(IV), (B)-(I), (C)-(II), (D)-(III)
- (2) (A)-(III), (B)-(II), (C)-(I), (D)-(IV)
- (3) (A)-(I), (B)-(III), (C)-(IV), (D)-(II)
- (4) (A)-(II), (B)-(III), (C)-(I), (D)-(IV)

Options :

- 92090636845. 1
- 92090636846. 2

92090636847. 3

92090636848. 4

Question Number : 13 Question Id : 9209069328 Question Type : MCQ Option Shuffling : No Is Question Mandatory : No Calculator : None Response Time : N.A Think Time : N.A Minimum Instruction Time : 0

Correct Marks : 4 Wrong Marks : 1

Match the names with their List I with List II :

List I	List II
(A) Ryan Felton	(I) New York analytics startup
(B) Chainalysis	(II) The man who marketed the crypto scheme
(C) Sam Bankman Frier	(III) One of the founder's of Chainalysis
(D) Jonathan Levin	(IV) The head whose firm lost 400 million dollars

Choose the correct answer from the options given below :

- (1) (A)-(I), (B)-(III), (C)-(IV), (D)-(II)
- (2) (A)-(II), (B)-(I), (C)-(III), (D)-(IV)
- (3) (A)-(II), (B)-(I), (C)-(IV), (D)-(III)
- (4) (A)-(III), (B)-(II), (C)-(IV), (D)-(I)

Options :

92090636849. 1

92090636850. 2

92090636851. 3

92090636852. 4

Question Number : 14 Question Id : 9209069329 Question Type : MCQ Option Shuffling : No Is Question Mandatory : No Calculator : None Response Time : N.A Think Time : N.A Minimum Instruction Time : 0

Correct Marks : 4 Wrong Marks : 1

Compare the sentences in List I with suitable propositions from List II :

- | List I | List II |
|---|------------|
| (A) In your country are children largely subservient ___ their parents. | (I) for |
| (B) Do most drivers show a total disregard __ the speed limit | (II) on |
| (C) What would you like to see a ban __ in your country | (III) over |
| (D) Do parents usually have a firm control ___ their teenagers. | (IV) to |

Choose the correct answer from the options given below :

- (1) (A)-(III), (B)-(I), (C)-(IV), (D)-(II)
- (2) (A)-(II), (B)-(III), (C)-(I), (D)-(IV)
- (3) (A)-(I), (B)-(III), (C)-(IV), (D)-(II)
- (4) (A)-(IV), (B)-(I), (C)-(II), (D)-(III)

Options :

92090636853. 1
92090636854. 2
92090636855. 3
92090636856. 4

Sub-Section Number : 3
Sub-Section Id : 920906303
Question Shuffling Allowed : Yes
Is Section Default? : null

Question Number : 15 Question Id : 9209069330 Question Type : MCQ Option Shuffling : No Is Question Mandatory : No Calculator : None Response Time : N.A Think Time : N.A Minimum Instruction Time : 0

Correct Marks : 4 Wrong Marks : 1

Fill in the blanks in the sentences in List I with the correct form of the adjective from List II :

- | List I | List II |
|--------------------------------|------------------|
| (A) It's in the ___ chapter. | (I) childish |
| (B) Do we have ___ proof? | (II) concluding |
| (C) He has a ___ enthusiasm. | (III) conclusive |
| (D) Her behaviour is very ___. | (IV) childlike |

Choose the correct answer from the options given below :

- (1) (A)-(I), (B)-(II), (C)-(III), (D)-(IV)
- (2) (A)-(III), (B)-(II), (C)-(I), (D)-(IV)
- (3) (A)-(II), (B)-(III), (C)-(IV), (D)-(I)
- (4) (A)-(IV), (B)-(III), (C)-(II), (D)-(I)

Options :

- 92090636857. 1
- 92090636858. 2
- 92090636859. 3
- 92090636860. 4

Question Number : 15 Question Id : 9209069330 Question Type : MCQ Option Shuffling : No Is Question Mandatory : No Calculator : None Response Time : N.A Think Time : N.A Minimum Instruction Time : 0

Correct Marks : 4 Wrong Marks : 1

Fill in the blanks in the sentences in List I with the correct form of the adjective from List II :

- | List I | List II |
|--------------------------------|------------------|
| (A) It's in the ___ chapter. | (I) childish |
| (B) Do we have ___ proof? | (II) concluding |
| (C) He has a ___ enthusiasm. | (III) conclusive |
| (D) Her behaviour is very ___. | (IV) childlike |

Choose the correct answer from the options given below :

- (1) (A)-(I), (B)-(II), (C)-(III), (D)-(IV)
- (2) (A)-(III), (B)-(II), (C)-(I), (D)-(IV)
- (3) (A)-(II), (B)-(III), (C)-(IV), (D)-(I)
- (4) (A)-(IV), (B)-(III), (C)-(II), (D)-(I)

Options :

- 92090636857. 1
- 92090636858. 2
- 92090636859. 3
- 92090636860. 4

Question Number : 16 Question Id : 9209069331 Question Type : MCQ Option Shuffling : No Is Question Mandatory : No Calculator : None Response Time : N.A Think Time : N.A Minimum Instruction Time : 0

Correct Marks : 4 Wrong Marks : 1

Dedicated to deciphering them.

Choose another word of the same meaning for the underlined word above.

- | | |
|-----------------|-----------------|
| (1) Ciphering | (2) Enciphering |
| (3) Confounding | (4) Explaining |

Options :

- 92090636861. 1
- 92090636862. 2
- 92090636863. 3

92090636864. 4

Question Number : 16 Question Id : 9209069331 Question Type : MCQ Option Shuffling : No Is Question Mandatory : No Calculator : None Response Time : N.A Think Time : N.A Minimum Instruction Time : 0

Correct Marks : 4 Wrong Marks : 1

Dedicated to deciphering them.

Choose another word of the same meaning for the underlined word above.

- | | |
|-----------------|-----------------|
| (1) Ciphering | (2) Enciphering |
| (3) Confounding | (4) Explaining |

Options :

- 92090636861. 1
- 92090636862. 2
- 92090636863. 3
- 92090636864. 4

Question Number : 17 Question Id : 9209069332 Question Type : MCQ Option Shuffling : No Is Question Mandatory : No Calculator : None Response Time : N.A Think Time : N.A Minimum Instruction Time : 0

Correct Marks : 4 Wrong Marks : 1

Rephrase the following sentence by choosing the appropriate Idiom.

She was affected by the situation when her two bosses had different ideas about what her job involved.

- | | |
|-----------------------------|-----------------------|
| (1) Caught in the crossfire | (2) Caught napping |
| (3) Caught red-handed | (4) Caught in the act |

Options :

- 92090636865. 1
- 92090636866. 2
- 92090636867. 3
- 92090636868. 4

Question Number : 17 Question Id : 9209069332 Question Type : MCQ Option Shuffling : No Is Question Mandatory : No Calculator : None Response Time : N.A Think Time : N.A Minimum Instruction Time : 0

Correct Marks : 4 Wrong Marks : 1

Rephrase the following sentence by choosing the appropriate Idiom.

She was affected by the situation when her two bosses had different ideas about what her job involved.

- | | |
|-----------------------------|-----------------------|
| (1) Caught in the crossfire | (2) Caught napping |
| (3) Caught red-handed | (4) Caught in the act |

Options :

- 92090636865. 1
- 92090636866. 2
- 92090636867. 3
- 92090636868. 4

Question Number : 18 Question Id : 9209069333 Question Type : MCQ Option Shuffling : No Is Question Mandatory : No Calculator : None Response Time : N.A Think Time : N.A Minimum Instruction Time : 0

Correct Marks : 4 Wrong Marks : 1

Replace the underlined word with the correct Antonym from the options:

One of the powerful traditions of Japanese life is to always exhibit enthusiasm against pain.

- | | |
|---------------|------------------|
| (1) Precision | (2) Exuberance |
| (3) Stoicism | (4) Satisfaction |

Options :

- 92090636869. 1
- 92090636870. 2
- 92090636871. 3
- 92090636872. 4

Question Number : 18 Question Id : 9209069333 Question Type : MCQ Option Shuffling : No Is Question Mandatory : No Calculator : None Response Time : N.A Think Time : N.A Minimum Instruction Time : 0

Correct Marks : 4 Wrong Marks : 1

Replace the underlined word with the correct Antonym from the options:

One of the powerful traditions of Japanese life is to always exhibit enthusiasm against pain.

- | | |
|---------------|------------------|
| (1) Precision | (2) Exuberance |
| (3) Stoicism | (4) Satisfaction |

Options :

92090636869. 1
92090636870. 2
92090636871. 3
92090636872. 4

Question Number : 19 Question Id : 9209069334 Question Type : MCQ Option Shuffling : No Is Question Mandatory : No Calculator : None Response Time : N.A Think Time : N.A Minimum Instruction Time : 0

Correct Marks : 4 Wrong Marks : 1

A drug dealer or scamster could transfer large quantities of money without a bank to validate the transaction.

Choose the Antonym for the underlined word.

- | | |
|----------------|-------------|
| (1) Agree | (2) Confirm |
| (3) Give Value | (4) refute |

Options :

92090636873. 1
92090636874. 2
92090636875. 3
92090636876. 4

Question Number : 19 Question Id : 9209069334 Question Type : MCQ Option Shuffling : No Is Question Mandatory : No Calculator : None Response Time : N.A Think Time : N.A Minimum Instruction Time : 0

Correct Marks : 4 Wrong Marks : 1

A drug dealer or scamster could transfer large quantities of money without a bank to validate the transaction.

Choose the Antonym for the underlined word.

- | | |
|----------------|-------------|
| (1) Agree | (2) Confirm |
| (3) Give Value | (4) refute |

Options :

92090636873. 1
92090636874. 2
92090636875. 3
92090636876. 4

Question Number : 20 Question Id : 9209069335 Question Type : MCQ Option Shuffling : No Is Question Mandatory : No Calculator : None Response Time : N.A Think Time : N.A Minimum

Enable Mark as Answered Mark for Review and Clear Response : Yes
Maximum Instruction Time : 0
Sub-Section Number : 1
Sub-Section Id : 920906304
Question Shuffling Allowed : Yes
Is Section Default? : null

Question Number : 21 Question Id : 9209069336 Question Type : MCQ Option Shuffling : No Is Question Mandatory : No Calculator : None Response Time : N.A Think Time : N.A Minimum Instruction Time : 0
Correct Marks : 4 Wrong Marks : 1

Who won the 2022 Nobel prize in literature?

- (1) Annie Ernause (2) Alain Aspect
(3) Carolyn Bertozzi (4) Svante paabo

Options :

92090636881. 1
92090636882. 2
92090636883. 3
92090636884. 4

Question Number : 21 Question Id : 9209069336 Question Type : MCQ Option Shuffling : No Is Question Mandatory : No Calculator : None Response Time : N.A Think Time : N.A Minimum Instruction Time : 0
Correct Marks : 4 Wrong Marks : 1

साहित्य के क्षेत्र में 2022 का नोबल पुरस्कार किसने जीता?

- (1) एनील एनी एर्नॉक्स (2) अलाइन अर्पेकर
(3) कारोलिन बर्टोजी (4) स्वान्ते पाब्रो

Options :

92090636881. 1
92090636882. 2
92090636883. 3
92090636884. 4

Question Number : 22 Question Id : 9209069337 Question Type : MCQ Option Shuffling : No Is Question Mandatory : No Calculator : None Response Time : N.A Think Time : N.A Minimum Instruction Time : 0
Correct Marks : 4 Wrong Marks : 1

Age of voting was reduced from 21 to 18 in the year 1988. It is contained in which Article of constitution?

(1) Article 243

(2) Article 246A

(3) Article 326

(4) Article 342A

Options :

92090636885. 1

92090636886. 2

92090636887. 3

92090636888. 4

Question Number : 22 Question Id : 9209069337 Question Type : MCQ Option Shuffling : No Is Question Mandatory : No Calculator : None Response Time : N.A Think Time : N.A Minimum Instruction Time : 0

Correct Marks : 4 Wrong Marks : 1

वर्ष 1988 में मतदान की आयु 21 से घटाकर 18 की गई थी। यह संविधान के किस अनुच्छेद में सम्मिलित है?

(1) अनुच्छेद 243

(2) अनुच्छेद 246 अ

(3) अनुच्छेद 326

(4) अनुच्छेद 342 अ

Options :

92090636885. 1

92090636886. 2

92090636887. 3

92090636888. 4

Question Number : 23 Question Id : 9209069338 Question Type : MCQ Option Shuffling : No Is Question Mandatory : No Calculator : None Response Time : N.A Think Time : N.A Minimum Instruction Time : 0

Correct Marks : 4 Wrong Marks : 1

Given below are two statements :

Statement I : Dada bhai Naoroji was one of the founders of the India National Congress. He was the first Indian to be elected as a member of UK's parliament.

Statement II : He was also called the "Grand Old Man of India".

In the light of the above statements, choose the correct answer from the options given below :

- (1) Both Statement I and Statement II are true
- (2) Both Statement I and Statement II are false
- (3) Statement I is true but Statement II is false
- (4) Statement I is false but Statement II is true

Options :

92090636889. 1
92090636890. 2
92090636891. 3
92090636892. 4

Question Number : 23 Question Id : 9209069338 Question Type : MCQ Option Shuffling : No Is Question Mandatory : No Calculator : None Response Time : N.A Think Time : N.A Minimum Instruction Time : 0

Correct Marks : 4 Wrong Marks : 1

नीचे दो कथन दिए गए हैं :

कथन I : दादाभाई नौरोजी, भारतीय राष्ट्रीय कांग्रेस के संस्थापकों में से एक थे। वे पहले भारतीय थे जो कि यूनाइटेड किंगडम की संसद में एक सदस्य के रूप में चुने गए थे।

कथन II : उन्हें "भारत का वयोवृद्ध पुरुष" (ग्रांड ओल्ड मैन ऑफ इंडिया) के नाम से जाना जाता था।

उपरोक्त कथन के आलोक में, नीचे दिए गए विकल्पों में से सबसे उपयुक्त उत्तर का चयन कीजिए :

- (1) कथन I और II दोनों सत्य हैं
- (2) कथन I और II दोनों असत्य हैं
- (3) कथन I सत्य है, लेकिन कथन II असत्य है
- (4) कथन I असत्य है, लेकिन कथन II सत्य है

Options :

92090636889. 1
92090636890. 2

92090636891. 3

92090636892. 4

Question Number : 24 Question Id : 9209069339 Question Type : MCQ Option Shuffling : No Is Question Mandatory : No Calculator : None Response Time : N.A Think Time : N.A Minimum Instruction Time : 0

Correct Marks : 4 Wrong Marks : 1

Match List I with List II :

List I	List II
(Provisions of constitution)	(Sources of constitution)
(A) Law making procedures, single citizenship, Bi-cameral parliamentary	(I) Constitution of former USSR
(B) Preamble, fundamental rights and independence of Judiciary	(II) Constitution of Australia
(C) Fundamental Duties	(III) Constitution of Britain
(D) Idea of concurrent list, trade and commerce provisions.	(IV) Constitution of U.S.A

Choose the correct answer from the options given below :

- (1) (A)-(II), (B)-(III), (C)-(IV), (D)-(I)
- (2) (A)-(I), (B)-(II), (C)-(IV), (D)-(III)
- (3) (A)-(IV), (B)-(I), (C)-(II), (D)-(III)
- (4) (A)-(III), (B)-(IV), (C)-(I), (D)-(II)

Options :

92090636893. 1

92090636894. 2

92090636895. 3

92090636896. 4

Question Number : 24 Question Id : 9209069339 Question Type : MCQ Option Shuffling : No Is Question Mandatory : No Calculator : None Response Time : N.A Think Time : N.A Minimum Instruction Time : 0

Correct Marks : 4 Wrong Marks : 1

सूची-I के साथ सूची-II का मिलान कीजिए :

सूची-I	सूची-II
संविधान के प्रावधान	संविधान के स्रोत
(A) विधि निर्माण प्रक्रिया, एकल नागरिकता द्विसदनीय संसदीय प्रणाली	(I) पूर्व सोवियत संघ का संविधान
(B) प्रस्तावना, मूलभूत अधिकार और न्यायपालिका की स्वतंत्रता	(II) आस्ट्रेलिया का संविधान
(C) मूलभूत कर्तव्य	(III) ब्रिटेन का संविधान
(D) समवर्ती सूची का विचार, व्यापार और वाणिज्य का प्रावधान	(IV) संयुक्त राज्य अमरीका का संविधान

नीचे दिए गए विकल्पों में से सही उत्तर का चयन कीजिए :

- (1) (A)-(II), (B)-(III), (C)-(IV), (D)-(I)
- (2) (A)-(I), (B)-(II), (C)-(IV), (D)-(III)
- (3) (A)-(IV), (B)-(I), (C)-(II), (D)-(III)
- (4) (A)-(III), (B)-(IV), (C)-(I), (D)-(II)

Options :

92090636893. 1
92090636894. 2
92090636895. 3
92090636896. 4

Question Number : 25 Question Id : 9209069340 Question Type : MCQ Option Shuffling : No Is Question Mandatory : No Calculator : None Response Time : N.A Think Time : N.A Minimum Instruction Time : 0

Correct Marks : 4 Wrong Marks : 1

Mahatma Gandhi started his first Satyagraha movement from which place of India?

- (1) Sabarmati Ashram in Gujarat
- (2) Sevagram Ashram near Wardha
- (3) Champaran in Bihar
- (4) Kheda Gujarat

Options :

92090636897. 1
92090636898. 2
92090636899. 3
92090636900. 4

Question Number : 25 Question Id : 9209069340 Question Type : MCQ Option Shuffling : No Is Question Mandatory : No Calculator : None Response Time : N.A Think Time : N.A Minimum Instruction Time : 0

Correct Marks : 4 Wrong Marks : 1

भारतवर्ष में किस स्थान से महात्मा गांधी ने पहला सत्याग्रह आरम्भ किया था ?

- | | |
|------------------------------|-----------------------------------|
| (1) गुजरात में साबरमती आश्रम | (2) वर्धा के निकट सेवाग्राम आश्रम |
| (3) बिहार में चम्पारण | (4) खेड़ा, गुजरात |

Options :

92090636897. 1
92090636898. 2
92090636899. 3
92090636900. 4

Question Number : 26 Question Id : 9209069341 Question Type : MCQ Option Shuffling : No Is Question Mandatory : No Calculator : None Response Time : N.A Think Time : N.A Minimum Instruction Time : 0

Correct Marks : 4 Wrong Marks : 1

Who was the first recipient of the Bharat Ratna Award?

- | | |
|-----------------------|------------------------|
| (1) Dr. Zahir Hussain | (2) Sataya Jit Ray |
| (3) Rattan Tata | (4) C. Rajagopalachari |

Options :

92090636901. 1
92090636902. 2
92090636903. 3
92090636904. 4

Question Number : 26 Question Id : 9209069341 Question Type : MCQ Option Shuffling : No Is Question Mandatory : No Calculator : None Response Time : N.A Think Time : N.A Minimum Instruction Time : 0

Correct Marks : 4 Wrong Marks : 1

भारत रत्न पुरस्कार के प्रथम प्राप्तकर्ता कौन थे ?

- | | |
|---------------------|-----------------------|
| (1) डॉ. जाकिर हुसैन | (2) सत्यजित राय |
| (3) रतन टाटा | (4) सी. राजगोपालाचारी |

Options :

92090636901. 1
92090636902. 2
92090636903. 3
92090636904. 4

Question Number : 27 Question Id : 9209069342 Question Type : MCQ Option Shuffling : No Is Question Mandatory : No Calculator : None Response Time : N.A Think Time : N.A Minimum Instruction Time : 0

Correct Marks : 4 Wrong Marks : 1

The first Bharat Ratna was given to three persons in 1954, the one among the three is:

- | | |
|-----------------------|-------------------------|
| (1) Rattan Tata | (2) Gobind Vallabh Pant |
| (3) Dr. Zabir Hussian | (4) C.V Raman |

Options :

92090636905. 1
92090636906. 2
92090636907. 3
92090636908. 4

Question Number : 27 Question Id : 9209069342 Question Type : MCQ Option Shuffling : No Is Question Mandatory : No Calculator : None Response Time : N.A Think Time : N.A Minimum Instruction Time : 0

Correct Marks : 4 Wrong Marks : 1

वर्ष 1954 में प्रथम बार भारत रत्न तीन व्यक्तियों को दिया गया था, उन तीन में से एक थे:

- | | |
|-----------------------------|-----------------------|
| (1) जहाँगीर रतन जी भाई टाटा | (2) गोबिन्द वल्लभ पंत |
| (3) डॉ. जाकिर हुसैन | (4) सी.वी. रमन |

Options :

92090636905. 1
92090636906. 2
92090636907. 3
92090636908. 4

Question Number : 28 Question Id : 9209069343 Question Type : MCQ Option Shuffling : No Is Question Mandatory : No Calculator : None Response Time : N.A Think Time : N.A Minimum Instruction Time : 0

Correct Marks : 4 Wrong Marks : 1

Who out of the following won gold medal for India in Common Wealth Games 2022?

- | | |
|-------------------|--------------------|
| (1) Sarket Sagar | (2) Harjinder Kaur |
| (3) Nikhat Zareen | (4) Sandeep Kumar |

Options :

92090636909. 1
92090636910. 2
92090636911. 3
92090636912. 4

Question Number : 28 Question Id : 9209069343 Question Type : MCQ Option Shuffling : No Is Question Mandatory : No Calculator : None Response Time : N.A Think Time : N.A Minimum Instruction Time : 0

Correct Marks : 4 Wrong Marks : 1

वर्ष 2022 के कॉमन वेल्थ गेम्स में निम्नलिखित में से किसने भारत के लिए स्वर्ण पदक जीता ?

- | | |
|----------------|------------------|
| (1) संकेत सागर | (2) हरजिन्दर कौर |
| (3) निखत जरीन | (4) संदीप कुमार |

Options :

92090636909. 1
92090636910. 2
92090636911. 3
92090636912. 4

Question Number : 29 Question Id : 9209069344 Question Type : MCQ Option Shuffling : No Is Question Mandatory : No Calculator : None Response Time : N.A Think Time : N.A Minimum Instruction Time : 0

Correct Marks : 4 Wrong Marks : 1

First Indian Woman to climb Mount Everest twice is ____

- | | |
|--------------------|--------------------|
| (1) Bachendri Pal | (2) Santhosh Yadav |
| (3) Anshu Jamsarpa | (4) Nungshi Malik |

Options :

92090636913. 1
92090636914. 2
92090636915. 3
92090636916. 4

Question Number : 29 Question Id : 9209069344 Question Type : MCQ Option Shuffling : No Is Question Mandatory : No Calculator : None Response Time : N.A Think Time : N.A Minimum Instruction Time : 0

Correct Marks : 4 Wrong Marks : 1

माऊंट एवरेस्ट पर दो बार आरोहण करने वाली प्रथम भारतीय महिला हैं

- | | |
|--------------------|-----------------|
| (1) बचेन्द्री पाल | (2) संतोष यादव |
| (3) अन्शु जमेसेरपा | (4) नुंगशी मलिक |

Options :

92090636913. 1
92090636914. 2
92090636915. 3
92090636916. 4

Question Number : 30 Question Id : 9209069345 Question Type : MCQ Option Shuffling : No Is Question Mandatory : No Calculator : None Response Time : N.A Think Time : N.A Minimum Instruction Time : 0

Correct Marks : 4 Wrong Marks : 1

Given below are two statements :

Statement I : Amalgamation is the merger to two or more companies when necessity arises into a large organization.

Statement II : The old firms do not lose their identity even after merger.

In the light of the above statements, choose the correct answer from the options given below :

- (1) Both Statement I and Statement II are correct
- (2) Both Statement I and Statement II are incorrect
- (3) Statement I is correct but Statement II is incorrect
- (4) Statement I is incorrect but Statement II is correct

Options :

92090636917. 1
92090636918. 2
92090636919. 3
92090636920. 4

Question Number : 30 Question Id : 9209069345 Question Type : MCQ Option Shuffling : No Is Question Mandatory : No Calculator : None Response Time : N.A Think Time : N.A Minimum Instruction Time : 0

Correct Marks : 4 Wrong Marks : 1

नीचे दो कथन दिए गए हैं :

कथन I : जब किसी बड़े संगठन में अनिवार्यता उत्पन्न होती है तब दो या अधिक कंपनियों का विलय होना एकीकरण है।

कथन II : विलय होने के बाद भी पुरानी फर्म अपनी पहचान नहीं खोती हैं।

उपरोक्त कथन के आलोक में, नीचे दिए गए विकल्पों में से सबसे उपयुक्त उत्तर का चयन कीजिए :

- (1) कथन I और II दोनों सही हैं
- (2) कथन I और II दोनों गलत हैं
- (3) कथन I सही है, लेकिन कथन II गलत है
- (4) कथन I गलत है, लेकिन कथन II सही है

Options :

92090636917. 1
92090636918. 2

92090636919. 3

92090636920. 4

Question Number : 31 Question Id : 9209069346 Question Type : MCQ Option Shuffling : No Is Question Mandatory : No Calculator : None Response Time : N.A Think Time : N.A Minimum Instruction Time : 0

Correct Marks : 4 Wrong Marks : 1

The CBIC (Central Board of Indirect Taxes and Customs) has exempted which of the product from Custom Duty and Agricultural Infrastructural Development less?

- | | |
|----------------|-----------|
| (1) Jute | (2) Wheat |
| (3) Raw Cotton | (4) Rice |

Options :

92090636921. 1

92090636922. 2

92090636923. 3

92090636924. 4

Question Number : 31 Question Id : 9209069346 Question Type : MCQ Option Shuffling : No Is Question Mandatory : No Calculator : None Response Time : N.A Think Time : N.A Minimum Instruction Time : 0

Correct Marks : 4 Wrong Marks : 1

सी.बी.आई.सी. (केन्द्रीय अप्रत्यक्ष कर और सीमा शुल्क बोर्ड) ने किन उत्पादों को सीमा शुल्क और कृषि आधारभूत संरचनात्मक विकास अधिकार (सेस) से मुक्त रखा है ?

- | | |
|--------------------------|-----------|
| (1) पटसन (जूट) | (2) गेहूँ |
| (3) कच्चा कपास (रॉ काटन) | (4) चावल |

Options :

92090636921. 1

92090636922. 2

92090636923. 3

92090636924. 4

Question Number : 32 Question Id : 9209069347 Question Type : MCQ Option Shuffling : No Is Question Mandatory : No Calculator : None Response Time : N.A Think Time : N.A Minimum Instruction Time : 0

Correct Marks : 4 Wrong Marks : 1

Which Indian Bank began in 1990 when Chandra Shekhar Ghosh created a microfinance Institution

- | | |
|------------------|------------------|
| (1) Federal Bank | (2) Vijay Bank |
| (3) Yes Bank | (4) Bandhan Bank |

Options :

92090636925. 1
92090636926. 2
92090636927. 3
92090636928. 4

Question Number : 32 Question Id : 9209069347 Question Type : MCQ Option Shuffling : No Is Question Mandatory : No Calculator : None Response Time : N.A Think Time : N.A Minimum Instruction Time : 0

Correct Marks : 4 Wrong Marks : 1

जब चन्द्र शेखर घोष ने एक माइक्रो फाइनांस संस्था बनायी, तब 1990 में कौन सा भारतीय बैंक आरंभ हुआ ?

- (1) फेड्रल बैंक (2) विजया बैंक
(3) यस बैंक (4) बंधन बैंक

Options :

92090636925. 1
92090636926. 2
92090636927. 3
92090636928. 4

Question Number : 33 Question Id : 9209069348 Question Type : MCQ Option Shuffling : No Is Question Mandatory : No Calculator : None Response Time : N.A Think Time : N.A Minimum Instruction Time : 0

Correct Marks : 4 Wrong Marks : 1

Egg Yolk, Salam, Liver and milk are the rich sources of while Vitamin?

- (1) Vitamin A (2) Vitamin B
(3) Vitamin K (4) Vitamin D

Options :

92090636929. 1
92090636930. 2
92090636931. 3
92090636932. 4

Question Number : 33 Question Id : 9209069348 Question Type : MCQ Option Shuffling : No Is Question Mandatory : No Calculator : None Response Time : N.A Think Time : N.A Minimum Instruction Time : 0

Correct Marks : 4 Wrong Marks : 1

अंडे की जरदी, सलमन मछली, यकृत और दूध किस विटामिन के मुख्य स्रोत हैं ?

- (1) विटामिन - A (2) विटामिन - B
(3) विटामिन - K (4) विटामिन - D

Options :

- 92090636929. 1
- 92090636930. 2
- 92090636931. 3
- 92090636932. 4

Question Number : 34 Question Id : 9209069349 Question Type : MCQ Option Shuffling : No Is Question Mandatory : No Calculator : None Response Time : N.A Think Time : N.A Minimum Instruction Time : 0

Correct Marks : 4 Wrong Marks : 1

Human Eye is a sensory organ which helps us to see objects. Identify the correct statements:-

- (A) Inner most layer of eye is called Retina which has photo receptor cells.
- (B) Photo receptor cells are of two type rods and cones. Day eight vision and colour vision is function of rods.
- (C) Photo receptor cells are not present in blind spot
- (D) Lens of the eye is a concave lens

Choose the correct answer from the options given below :

- (1) (A), (C) only
- (2) (A), (B), (C) only
- (3) (B), (C) only
- (4) (A), (D) only

Options :

- 92090636933. 1
- 92090636934. 2
- 92090636935. 3
- 92090636936. 4

Question Number : 34 Question Id : 9209069349 Question Type : MCQ Option Shuffling : No Is Question Mandatory : No Calculator : None Response Time : N.A Think Time : N.A Minimum Instruction Time : 0

Correct Marks : 4 Wrong Marks : 1

मनुष्य की आँख एक संवेदक अंग है। जो हमें वस्तुओं को देखने में सहायता करती है। सही कथन को पहचानिए :-

- (A) आँख की सबसे भीतरी परत रेटिना कहलाती है जिसमें प्रकाशग्राही कोशिकाएँ होती हैं।
- (B) फोटो रिसेप्टर कोशिकाएँ दो प्रकार की होती हैं छड़ और शंकु। दिन की प्रकाश दृष्टि और रंग दृष्टि छड़ (Rods) का कार्य है।
- (C) ब्लाइंड स्पॉट में फोटोरिसेप्टर कोशिकाएँ मौजूद नहीं होतीं।
- (D) आँख का लेंस अवतल लेंस होता है।

नीचे दिए गए विकल्पों में से सही उत्तर का चयन कीजिए :

- (1) केवल (A) और (C)
- (2) केवल (A), (B) और (C)
- (3) केवल (B) और (C)
- (4) केवल (A) और (D)

Options :

- 92090636933. 1
- 92090636934. 2
- 92090636935. 3
- 92090636936. 4

Question Number : 35 Question Id : 9209069350 Question Type : MCQ Option Shuffling : No Is Question Mandatory : No Calculator : None Response Time : N.A Think Time : N.A Minimum Instruction Time : 0

Correct Marks : 4 Wrong Marks : 1

The 28th state of India is :

- (1) Ladakh
- (2) Chatisgarh
- (3) Jharkhand
- (4) Telangana

Options :

- 92090636937. 1
- 92090636938. 2
- 92090636939. 3
- 92090636940. 4

Question Number : 35 Question Id : 9209069350 Question Type : MCQ Option Shuffling : No Is Question Mandatory : No Calculator : None Response Time : N.A Think Time : N.A Minimum Instruction Time : 0

Correct Marks : 4 Wrong Marks : 1

भारत वर्ष का 28वाँ राज्य है :

- | | |
|------------|---------------|
| (1) लद्दाख | (2) छत्तीसगढ़ |
| (3) झारखंड | (4) तेलंगाना |

Options :

92090636937. 1
92090636938. 2
92090636939. 3
92090636940. 4

Question Number : 36 Question Id : 9209069351 Question Type : MCQ Option Shuffling : No Is Question Mandatory : No Calculator : None Response Time : N.A Think Time : N.A Minimum Instruction Time : 0

Correct Marks : 4 Wrong Marks : 1

Who resigned as the speaker of the Lok Sabha to contest presidential elections in 1967 and 1977?

- | | |
|--------------------------|-----------------------------|
| (1) GV Mavalankas | (2) Vihalbhai Patel |
| (3) Neelam Sanjiva Reddy | (4) Shyama Prasad Mukherjee |

Options :

92090636941. 1
92090636942. 2
92090636943. 3
92090636944. 4

Question Number : 36 Question Id : 9209069351 Question Type : MCQ Option Shuffling : No Is Question Mandatory : No Calculator : None Response Time : N.A Think Time : N.A Minimum Instruction Time : 0

Correct Marks : 4 Wrong Marks : 1

वर्ष 1969 और 1977 में राष्ट्रपति पद का चुनाव लड़ने के लिए लोकसभा के स्पीकर पद से किसने त्यागपत्र दिया था ?

- | | |
|-----------------------|---------------------------|
| (1) जी.वी. मावलंकर | (2) विहाल भाई पटेल |
| (3) नीलम संजीव रेड्डी | (4) श्यामा प्रसाद मुखर्जी |

Options :

92090636941. 1
92090636942. 2
92090636943. 3
92090636944. 4

Question Number : 37 Question Id : 9209069352 Question Type : MCQ Option Shuffling : No Is Question Mandatory : No Calculator : None Response Time : N.A Think Time : N.A Minimum Instruction Time : 0

Correct Marks : 4 Wrong Marks : 1

Given below are two statements: One is labelled as Assertion (A) and the other is labelled as Reason (R).

Assertion (A) : The air around Taj Mahal contains high level of sulphur and Nitrogen oxides. As a result the monument is getting discoloured and getting lustre less

Reasons (R) : Large number of hotels and parking areas use poor quality of fuel which on burning produce oxides resulting in acid rain, which when reacts with marble cause damage to the wonderful monument.

In the light of the above statements, choose the most appropriate answer from the options given below :

- (1) Both (A) and (R) are correct and (R) is the correct explanation of (A)
- (2) Both (A) and (R) are correct but (R) is NOT the correct explanation of (A)
- (3) (A) is correct but (R) is not correct
- (4) (A) is not correct but (R) is correct

Options :

- 92090636945. 1
- 92090636946. 2
- 92090636947. 3
- 92090636948. 4

Question Number : 37 Question Id : 9209069352 Question Type : MCQ Option Shuffling : No Is Question Mandatory : No Calculator : None Response Time : N.A Think Time : N.A Minimum Instruction Time : 0

Correct Marks : 4 Wrong Marks : 1

नीचे दो कथन दिए गए हैं : एक अभिकथन (Assertion (A)) के रूप में लिखित है तो दूसरा उसके कारण (Reasons (R)) के रूप में :

अभिकथन (A) : ताज महल के चहूँ ओर हवा में उच्च स्तर की सल्फर नाईट्रोजन ऑक्साइड समाविष्ट है। परिणाम स्वरूप स्मारक बदरंग और चमकहीन हो रहा है।

कारण (R) : ताजमहल के आस-पास अनेक होटल और पार्किंग क्षेत्र जहां पर कि घटिया गुणवत्ता का इंधर जलकर ऑक्साइड उत्पन्न करते हैं, परिणाम स्वरूप एसिड वर्षा होती है। जब वह मार्बल के सम्पर्क में आती है इस अदभूत स्मारक को हानि पहुंचती है।

उपरोक्त कथन के आलोक में, नीचे दिए गए विकल्पों में से सबसे उपयुक्त उत्तर का चयन कीजिए

- (1) (A) और (R) दोनों सही हैं और (R), (A) की सही व्याख्या है
- (2) (A) और (R) दोनों सही हैं, लेकिन (R), (A) की सही व्याख्या नहीं है
- (3) (A) सही है, लेकिन (R) सही नहीं है
- (4) (A) सही नहीं है, लेकिन (R) सही है

Options :

92090636945. 1
92090636946. 2
92090636947. 3
92090636948. 4

Question Number : 38 Question Id : 9209069353 Question Type : MCQ Option Shuffling : No Is Question Mandatory : No Calculator : None Response Time : N.A Think Time : N.A Minimum Instruction Time : 0

Correct Marks : 4 Wrong Marks : 1

UNFCCC is an international organization which aims to regulate:

- (1) Financial Crisis in any country through international cooperation
- (2) Achieve sustainable development goals
- (3) The use of insecticides and pesticides through international agreement
- (4) Green house gas emission through international cooperation and agreement

Options :

92090636949. 1
92090636950. 2
92090636951. 3
92090636952. 4

Question Number : 38 Question Id : 9209069353 Question Type : MCQ Option Shuffling : No Is Question Mandatory : No Calculator : None Response Time : N.A Think Time : N.A Minimum Instruction Time : 0

Correct Marks : 4 Wrong Marks : 1

यू.एन.एफ.सी.सी.सी. एक अन्तर्राष्ट्रीय संगठन है जिसका उद्देश्य _____ विनियमित करना है।

- (1) अन्तर्राष्ट्रीय सहयोग से किसी भी देश में वित्तीय संकट
- (2) संधारणीय विकास के लक्ष्य की प्राप्ति
- (3) अन्तर्राष्ट्रीय समझौते के माध्यम से कीटनाशक और कीटनाशी का प्रयोग
- (4) अन्तर्राष्ट्रीय सहयोग एवं समझौते के माध्यम से ग्रीन हाऊस गैस का उत्सर्जन

Options :

92090636949. 1
92090636950. 2
92090636951. 3
92090636952. 4

Question Number : 39 Question Id : 9209069354 Question Type : MCQ Option Shuffling : No Is Question Mandatory : No Calculator : None Response Time : N.A Think Time : N.A Minimum Instruction Time : 0

Correct Marks : 4 Wrong Marks : 1

Out of following which is not considered as a classical language by Government of India?

- | | |
|--------------|-------------|
| (1) Tamil | (2) Kannada |
| (3) Maithili | (4) Odiya |

Options :

92090636953. 1
92090636954. 2
92090636955. 3
92090636956. 4

Question Number : 39 Question Id : 9209069354 Question Type : MCQ Option Shuffling : No Is Question Mandatory : No Calculator : None Response Time : N.A Think Time : N.A Minimum Instruction Time : 0

Correct Marks : 4 Wrong Marks : 1

निम्नांकित में से कौन सी भाषा भारत सरकार द्वारा शास्त्रीय भाषा नहीं मानी गई है:

- | | |
|------------|------------|
| (1) तमिल | (2) कन्नड़ |
| (3) मैथिली | (4) उड़िया |

Options :

92090636953. 1
92090636954. 2
92090636955. 3
92090636956. 4

Question Number : 40 Question Id : 9209069355 Question Type : MCQ Option Shuffling : No Is Question Mandatory : No Calculator : None Response Time : N.A Think Time : N.A Minimum Instruction Time : 0

Correct Marks : 4 Wrong Marks : 1

Match List I with List II :

List I (Dance form)	List II (State they belong)
(A) Sattriya	(I) Tamil Nadu
(B) Kuchipudi	(II) Assam
(C) Mohiniyattam	(III) Andhra Pradesh
(D) Bharatnatyam	(IV) Kerala

Choose the correct answer from the options given below :

- (1) (A)-(II), (B)-(III), (C)-(I), (D)-(IV)
- (2) (A)-(III), (B)-(II), (C)-(IV), (D)-(I)
- (3) (A)-(II), (B)-(III), (C)-(IV), (D)-(I)
- (4) (A)-(III), (B)-(I), (C)-(II), (D)-(IV)

Options :

92090636957. 1
92090636958. 2
92090636959. 3
92090636960. 4

Question Number : 40 Question Id : 9209069355 Question Type : MCQ Option Shuffling : No Is Question Mandatory : No Calculator : None Response Time : N.A Think Time : N.A Minimum Instruction Time : 0

Correct Marks : 4 Wrong Marks : 1

सूची-I के साथ सूची-II का मिलान कीजिए :

सूची-I नृत्य प्रकार	सूची-II राज्य जिससे संबंध है
(A) सत्तरिया	(I) तमिलनाडु
(B) कुचिपुडि	(II) असम
(C) मोहिनियट्टम	(III) आंध्रप्रदेश
(D) भरतनाट्यम	(IV) केरल

नीचे दिए गए विकल्पों में से सही उत्तर का चयन कीजिए :

- (1) (A)-(II), (B)-(III), (C)-(I), (D)-(IV)
- (2) (A)-(III), (B)-(II), (C)-(IV), (D)-(I)
- (3) (A)-(II), (B)-(III), (C)-(IV), (D)-(I)
- (4) (A)-(III), (B)-(I), (C)-(II), (D)-(IV)

Options :

92090636957. 1
92090636958. 2
92090636959. 3
92090636960. 4

Question Number : 41 Question Id : 9209069356 Question Type : MCQ Option Shuffling : No Is Question Mandatory : No Calculator : None Response Time : N.A Think Time : N.A Minimum Instruction Time : 0

Correct Marks : 4 Wrong Marks : 1

_____ computer, we generally use in daily life for personal work is known as:

- | | |
|----------------|------------------|
| (1) Mani frame | (2) Work Station |
| (3) Micro | (4) Super |

Options :

- 92090636961. 1
- 92090636962. 2
- 92090636963. 3
- 92090636964. 4

Question Number : 41 Question Id : 9209069356 Question Type : MCQ Option Shuffling : No Is Question Mandatory : No Calculator : None Response Time : N.A Think Time : N.A Minimum Instruction Time : 0

Correct Marks : 4 Wrong Marks : 1

_____ कम्प्यूटर, हम सामान्यतः दैनंदिनी जीवन में निजी कार्यों के लिए प्रयोग करते हैं।

- | | |
|--------------|----------------|
| (1) मेनफ्रेम | (2) वर्कस्टेशन |
| (3) माइक्रो | (4) सुपर |

Options :

- 92090636961. 1
- 92090636962. 2
- 92090636963. 3
- 92090636964. 4

Question Number : 42 Question Id : 9209069357 Question Type : MCQ Option Shuffling : No Is Question Mandatory : No Calculator : None Response Time : N.A Think Time : N.A Minimum Instruction Time : 0

Correct Marks : 4 Wrong Marks : 1

In MS-Outlook your Inbox contains more than 5,000 emails. Many of them are from your Boss and many of them contain attachments. The fastest way to find the one huge video file is:

- (1) Search on the word 'video'.
- (2) Click All, arrange by video and look for max-size
- (3) Click All, arrange by Attachment, and look through the email with attachments
- (4) Click All, arrange by size, and look at the largest size email

Options :

- 92090636965. 1
- 92090636966. 2

92090636967. 3

92090636968. 4

Question Number : 42 Question Id : 9209069357 Question Type : MCQ Option Shuffling : No Is Question Mandatory : No Calculator : None Response Time : N.A Think Time : N.A Minimum Instruction Time : 0

Correct Marks : 4 Wrong Marks : 1

एम.एस. आउट लुक, आपका इन-बाक्स 5000 से अधिक ई-मेल समाविष्ट रखता है। बहुत-सी मेल आपके बाँस से प्राप्त होती हैं और बहुत सी मेल में संलग्नक तरीके होती हैं। बड़ी विडियो फाइल से खोजने के तीव्रतम तरीके

- (1) वीडियो पर खोजें।
- (2) क्लिक ऑल, अरेंज बाई विडियो और अधिकतम साईज देखें।
- (3) क्लिक ऑल, अरेंज बाई अटैचमेंट, और ई-मेल के माध्यम से अटैचमेंट्स देखें।
- (4) क्लिक ऑल अरेंज बाई साईज और बड़ी साईज की ई-मेल देखें।

Options :

92090636965. 1

92090636966. 2

92090636967. 3

92090636968. 4

Question Number : 43 Question Id : 9209069358 Question Type : MCQ Option Shuffling : No Is Question Mandatory : No Calculator : None Response Time : N.A Think Time : N.A Minimum Instruction Time : 0

Correct Marks : 4 Wrong Marks : 1

The following which is not a web-browser is:

- | | |
|-------------|------------|
| (1) Firefox | (2) Google |
| (3) Opera | (4) Edge |

Options :

92090636969. 1

92090636970. 2

92090636971. 3

92090636972. 4

Question Number : 43 Question Id : 9209069358 Question Type : MCQ Option Shuffling : No Is Question Mandatory : No Calculator : None Response Time : N.A Think Time : N.A Minimum Instruction Time : 0

Correct Marks : 4 Wrong Marks : 1

निम्नांकित में से कौन सा वेब ब्राऊजर नहीं है :

- | | |
|---------------|---------------|
| (1) फायरफॉक्स | (2) गूगल |
| (3) ओपेरा | (4) ऐज (Edge) |

Options :

- 92090636969. 1
- 92090636970. 2
- 92090636971. 3
- 92090636972. 4

Question Number : 44 Question Id : 9209069359 Question Type : MCQ Option Shuffling : No Is Question Mandatory : No Calculator : None Response Time : N.A Think Time : N.A Minimum Instruction Time : 0

Correct Marks : 4 Wrong Marks : 1

The one who gains unauthorized access, destroys vital data, denies legitimate user's service or causes problems for their targets is called:

- | | |
|----------------------------|----------------|
| (1) White hat hacker | (2) Programmer |
| (3) Database Administrator | (4) Cracker |

Options :

- 92090636973. 1
- 92090636974. 2
- 92090636975. 3
- 92090636976. 4

Question Number : 44 Question Id : 9209069359 Question Type : MCQ Option Shuffling : No Is Question Mandatory : No Calculator : None Response Time : N.A Think Time : N.A Minimum Instruction Time : 0

Correct Marks : 4 Wrong Marks : 1

जिस व्यक्ति को अप्रामाणिक पहुँच प्राप्त होती है वह महत्वपूर्ण आंकड़ों को नष्ट कर देता है, वैध प्रयोक्ता की सेवाएं इन्कार करता है अथवा उनके लक्ष्यों के प्रति समस्याएँ उत्पन्न कर देता है, उसे _____ जाना जाता है।

- | | |
|-----------------------------|----------------|
| (1) व्हाइट हैट हैक्सर्स | (2) प्रोग्रामर |
| (3) डेटा बेस एडमिनिस्ट्रेटर | (4) क्रैकर |

Options :

- 92090636973. 1
- 92090636974. 2
- 92090636975. 3
- 92090636976. 4

Question Number : 45 Question Id : 9209069360 Question Type : MCQ Option Shuffling : No Is Question Mandatory : No Calculator : None Response Time : N.A Think Time : N.A Minimum Instruction Time : 0

Correct Marks : 4 Wrong Marks : 1

In Microsoft window, different applications and documents are represented by:

- | | |
|-------------|------------|
| (1) Icons | (2) Labels |
| (3) Symbols | (4) Graphs |

Options :

- 92090636977. 1
- 92090636978. 2
- 92090636979. 3
- 92090636980. 4

Question Number : 45 Question Id : 9209069360 Question Type : MCQ Option Shuffling : No Is Question Mandatory : No Calculator : None Response Time : N.A Think Time : N.A Minimum Instruction Time : 0

Correct Marks : 4 Wrong Marks : 1

माइक्रोसॉफ्ट विंडोज में, भिन्न-भिन्न प्रकार के अनुप्रयोग (एप्लिकेशन) और दस्तावेज दर्शाते हैं

- | | |
|---------------|-------------|
| (1) आइकॉन्स | (2) लेबल्स |
| (3) सिम्बॉल्स | (4) ग्राफ्स |

Options :

- 92090636977. 1
- 92090636978. 2
- 92090636979. 3
- 92090636980. 4

Question Number : 46 Question Id : 9209069361 Question Type : MCQ Option Shuffling : No Is Question Mandatory : No Calculator : None Response Time : N.A Think Time : N.A Minimum Instruction Time : 0

Correct Marks : 4 Wrong Marks : 1

Assume three outlook commands you frequently use or toggle all day long: High priority, centre text, and High priority. How these three commands can be kept visible at all time?

- (1) Add three commands to the Quick Access toolbar
- (2) Add three commands to favorites
- (3) Add three commands to frequently used list
- (4) Use color coding for command button.

Options :

- 92090636981. 1
- 92090636982. 2
- 92090636983. 3
- 92090636984. 4

Question Number : 46 Question Id : 9209069361 Question Type : MCQ Option Shuffling : No Is Question Mandatory : No Calculator : None Response Time : N.A Think Time : N.A Minimum

Instruction Time : 0

Correct Marks : 4 Wrong Marks : 1

कल्पना कीजिए आप तीन आऊट लुक कमांड बारम्बार प्रयोग करते हैं या पूरे दिन टॉगल करते हैं। उच्च प्राथमिकता, सेन्टर टेक्सट और उच्च प्राथमिकता। ये तीनों कमांड किस प्रकार से पूरे कार्य समय में दृष्टिगोचर रखी जा सकती हैं?

- (1) क्लिक एक्सेस टूल बार पर तीनों कमांड को जोड़ें
- (2) फेवॉरिट्स में तीनों कमांड को जोड़ें
- (3) बारम्बार प्रयोग की जा रही सूची में तीनों कमांड जोड़ें
- (4) कमांड बटन के लिए कॅलर कोडिंग का प्रयोग करें।

Options :

92090636981. 1
92090636982. 2
92090636983. 3
92090636984. 4

Question Number : 47 Question Id : 9209069362 Question Type : MCQ Option Shuffling : No Is Question Mandatory : No Calculator : None Response Time : N.A Think Time : N.A Minimum Instruction Time : 0

Correct Marks : 4 Wrong Marks : 1

The shortcut key used to immediately return to the Desktop is:

- | | |
|---------------------|--------------|
| (1) Windows key + R | (2) Ctrl + R |
| (3) Windows Key + D | (4) Ctrl + D |

Options :

92090636985. 1
92090636986. 2
92090636987. 3
92090636988. 4

Question Number : 47 Question Id : 9209069362 Question Type : MCQ Option Shuffling : No Is Question Mandatory : No Calculator : None Response Time : N.A Think Time : N.A Minimum Instruction Time : 0

Correct Marks : 4 Wrong Marks : 1

तत्काल डेस्कटॉप पर वापसी हेतु कौन सी शॉर्टकट की प्रयोग में लाई जाती है:

- | | |
|-------------------------|------------------------------|
| (1) विंडोज़ की + आर (R) | (2) सीटीआरएल (ctrl) + आर (R) |
| (3) विंडोज़ की + डी (D) | (4) सीटीआरएल (ctrl) + डी (D) |

Options :

92090636985. 1
92090636986. 2
92090636987. 3
92090636988. 4

Question Number : 48 Question Id : 9209069363 Question Type : MCQ Option Shuffling : No Is Question Mandatory : No Calculator : None Response Time : N.A Think Time : N.A Minimum Instruction Time : 0

Correct Marks : 4 Wrong Marks : 1

Trojan Horse _____

- (A) Is a malicious program
- (B) Can transfer the information from infected system to another
- (C) Can provide the control of your system to another

Choose the correct answer from the options given below :

- (1) (A), (B)
- (2) (B), (C)
- (3) (C) only
- (4) (A), (B), (C)

Options :

92090636989. 1

92090636990. 2

92090636991. 3

92090636992. 4

Question Number : 48 Question Id : 9209069363 Question Type : MCQ Option Shuffling : No Is Question Mandatory : No Calculator : None Response Time : N.A Think Time : N.A Minimum Instruction Time : 0

Correct Marks : 4 Wrong Marks : 1

ट्रॉजन हॉर्स -

- (A) एक विद्वेषपूर्ण प्रोग्राम है।
- (B) संदूषित सिस्टम से दूसरे सिस्टम में सूचनाएं हस्तांतरित कर सकता।
- (C) आपके सिस्टम का नियंत्रण किसी अन्य व्यक्ति को उपलब्ध करा सकता।

नीचे दिए गए विकल्पों में से सही उत्तर का चयन कीजिए :

- (1) (A) और (B)
- (2) (B) और (C)
- (3) केवल (C)
- (4) (A), (B) और (C)

Options :

92090636989. 1

92090636990. 2

92090636991. 3

92090636992. 4

Question Number : 49 Question Id : 9209069364 Question Type : MCQ Option Shuffling : No Is Question Mandatory : No Calculator : None Response Time : N.A Think Time : N.A Minimum Instruction Time : 0

Correct Marks : 4 Wrong Marks : 1

The following unit which is responsible for converting the data received from the user into a computer understandable format?

- | | |
|-----------------|-------------------------------|
| (1) Output unit | (2) Input unit |
| (3) Memory Unit | (4) Arithmetic and Logic unit |

Options :

92090636993. 1

92090636994. 2

92090636995. 3

92090636996. 4

Question Number : 49 Question Id : 9209069364 Question Type : MCQ Option Shuffling : No Is Question Mandatory : No Calculator : None Response Time : N.A Think Time : N.A Minimum Instruction Time : 0

Correct Marks : 4 Wrong Marks : 1

प्रयोक्ता से प्राप्त आंकड़ों के कंप्यूटर में बोधगम्य फॉर्मेट में परिवर्तन करने हेतु, निम्नांकित में से कौन सी यूनिट विश्वसनीय है?

- | | |
|-------------------|--|
| (1) आऊट पुट यूनिट | (2) इनपुट यूनिट |
| (3) मेमोरी यूनिट | (4) अंकगणितीय और तार्किक (Logic) यूनिट |

Options :

92090636993. 1

92090636994. 2

92090636995. 3

92090636996. 4

Question Number : 50 Question Id : 9209069365 Question Type : MCQ Option Shuffling : No Is Question Mandatory : No Calculator : None Response Time : N.A Think Time : N.A Minimum Instruction Time : 0

Correct Marks : 4 Wrong Marks : 1

What is the maximum speed offered by Gigabit Ethernet?

- | | |
|--------------|---------------|
| (1) 1 Mbps | (2) 10 Mbps |
| (3) 100 Mbps | (4) 1000 Mbps |

Options :

- 92090636997. 1
- 92090636998. 2
- 92090636999. 3
- 92090637000. 4

Question Number : 50 Question Id : 9209069365 Question Type : MCQ Option Shuffling : No Is Question Mandatory : No Calculator : None Response Time : N.A Think Time : N.A Minimum Instruction Time : 0

Correct Marks : 4 Wrong Marks : 1

गिगाबाइट एथरनेट द्वारा प्रदत्त अधिकतम गति क्या है ?

- | | |
|-------------------------|--------------------------|
| (1) 1 एमबीपीएस (Mbps) | (2) 10 एमबीपीएस (Mbps) |
| (3) 100 एमबीपीएस (Mbps) | (4) 1000 एमबीपीएस (Mbps) |

Options :

- 92090636997. 1
- 92090636998. 2
- 92090636999. 3
- 92090637000. 4

Question Number : 51 Question Id : 9209069366 Question Type : MCQ Option Shuffling : No Is Question Mandatory : No Calculator : None Response Time : N.A Think Time : N.A Minimum Instruction Time : 0

Correct Marks : 4 Wrong Marks : 1

Out of 10 persons, 9 persons spent Rs.40 each for their snacks. The tenth person spent Rs.18 more than the average expenditure of all the ten. The total money spent by all of them was:

- | | |
|------------|------------|
| (1) Rs.400 | (2) Rs.360 |
| (3) Rs.420 | (4) Rs.480 |

Options :

- 92090637001. 1
- 92090637002. 2
- 92090637003. 3
- 92090637004. 4

Question Number : 51 Question Id : 9209069366 Question Type : MCQ Option Shuffling : No Is Question Mandatory : No Calculator : None Response Time : N.A Think Time : N.A Minimum Instruction Time : 0

Correct Marks : 4 Wrong Marks : 1

10 व्यक्तियों में से 9 व्यक्तियों ने अपने नाशते पर 40/- रु. प्रति व्यक्ति व्यय किए। दसवें व्यक्ति ने सभी दस व्यक्तियों के औसत व्यय से 18/- रु. अधिक खर्च किए। उन सभी व्यक्तियों द्वारा खर्च किए गए धन का कुल योग क्या था ?

- (1) रु.400/- (2) रु.360/-
(3) रु.420/- (4) रु.480/-

Options :

92090637001. 1
92090637002. 2
92090637003. 3
92090637004. 4

Question Number : 52 Question Id : 9209069367 Question Type : MCQ Option Shuffling : No Is Question Mandatory : No Calculator : None Response Time : N.A Think Time : N.A Minimum Instruction Time : 0

Correct Marks : 4 Wrong Marks : 1

The batting average for 20 innings of a cricket player is 25 runs. The highest score in an innings exceeds his lowest score by 86 runs. If these two innings are excluded the average score of the remaining 18 innings is 24 runs. Find his highest score in an innings.

- (1) 45 (2) 42
(3) 77 (4) 82

Options :

92090637005. 1
92090637006. 2
92090637007. 3
92090637008. 4

Question Number : 52 Question Id : 9209069367 Question Type : MCQ Option Shuffling : No Is Question Mandatory : No Calculator : None Response Time : N.A Think Time : N.A Minimum Instruction Time : 0

Correct Marks : 4 Wrong Marks : 1

एक खिलाड़ी की 20 पारियों की बैटिंग का औसत 25 रन है। पारियों में से उच्चतम स्कोर निम्नतम स्कोर से 86 अधिक है। यदि इन दो पारियों में उच्चतम स्कोर को हटा दिया जाए तो 18 पारियों का स्कोर औसतन 24 रन होगा। एक पारी में उसका उच्चतर स्कोर निकालें -

- (1) 45 (2) 42
(3) 77 (4) 82

Options :

92090637005. 1
92090637006. 2
92090637007. 3
92090637008. 4

Question Number : 53 Question Id : 9209069368 Question Type : MCQ Option Shuffling : No Is Question Mandatory : No Calculator : None Response Time : N.A Think Time : N.A Minimum Instruction Time : 0

Correct Marks : 4 Wrong Marks : 1

At what time between 7 and 8 o'clock will the hands of a clock be at right angle?

- (1) 24 $\frac{9}{11}$ min. past 7 (2) 20 $\frac{9}{10}$ min. past 7
(3) 18 $\frac{9}{11}$ min. past 7 (4) 21 $\frac{9}{11}$ min. past 7

Options :

92090637009. 1
92090637010. 2
92090637011. 3
92090637012. 4

Question Number : 53 Question Id : 9209069368 Question Type : MCQ Option Shuffling : No Is Question Mandatory : No Calculator : None Response Time : N.A Think Time : N.A Minimum Instruction Time : 0

Correct Marks : 4 Wrong Marks : 1

7 बजे और 8 बजे के मध्य में किस समय पर घड़ी की सूइयाँ कब परस्पर लम्ब होंगी ?

- (1) 7 बजकर $24\frac{9}{11}$ मि. (2) 7 बजकर $20\frac{9}{10}$ मि.
(3) 7 बजकर $18\frac{9}{11}$ मि. (4) 7 बजकर $21\frac{9}{11}$ मि.

Options :

92090637009. 1
92090637010. 2
92090637011. 3
92090637012. 4

Question Number : 54 Question Id : 9209069369 Question Type : MCQ Option Shuffling : No Is Question Mandatory : No Calculator : None Response Time : N.A Think Time : N.A Minimum Instruction Time : 0

Correct Marks : 4 Wrong Marks : 1

What was the day of the week on 14th June, 2002?

- (1) Thursday (2) Friday
(3) Saturday (4) Sunday

Options :

92090637013. 1
92090637014. 2
92090637015. 3

92090637016. 4

Question Number : 54 Question Id : 9209069369 Question Type : MCQ Option Shuffling : No Is Question Mandatory : No Calculator : None Response Time : N.A Think Time : N.A Minimum Instruction Time : 0

Correct Marks : 4 Wrong Marks : 1

14 जून, 2002 सप्ताह का कौन सा दिवस होगा ?

- (1) बृहस्पतिवार (2) शुक्रवार
(3) शनिवार (4) रविवार

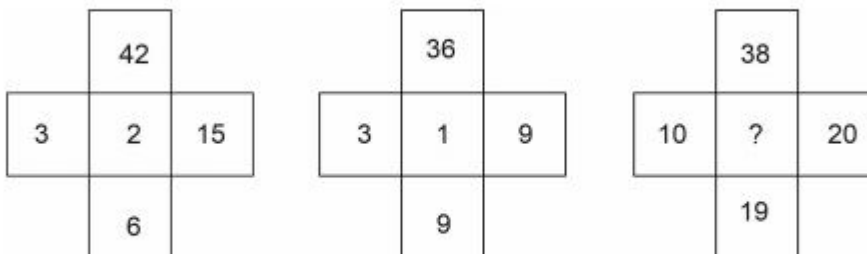
Options :

92090637013. 1
92090637014. 2
92090637015. 3
92090637016. 4

Question Number : 55 Question Id : 9209069370 Question Type : MCQ Option Shuffling : No Is Question Mandatory : No Calculator : None Response Time : N.A Think Time : N.A Minimum Instruction Time : 0

Correct Marks : 4 Wrong Marks : 1

Identify the missing number in place in the following three sub-matrices, in which the numbers are arranged in a certain way



- (1) 0 (2) 1
(3) 2 (4) 3

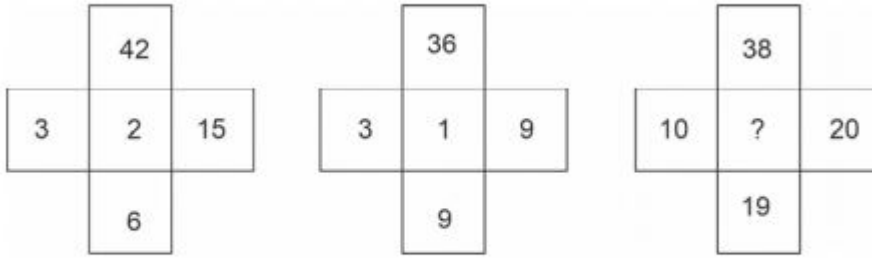
Options :

92090637017. 1
92090637018. 2
92090637019. 3
92090637020. 4

Question Number : 55 Question Id : 9209069370 Question Type : MCQ Option Shuffling : No Is Question Mandatory : No Calculator : None Response Time : N.A Think Time : N.A Minimum Instruction Time : 0

Correct Marks : 4 Wrong Marks : 1

निम्नांकित उप-आव्यूह, जिसमें संख्याएं विशेष प्रकार से व्यवस्थित की गई है, में ? स्थान पर लुप्त संख्या ज्ञात करें -



- (1) 0
(3) 2

- (2) 1
(4) 3

Options :

92090637017. 1
92090637018. 2
92090637019. 3
92090637020. 4

Question Number : 56 Question Id : 9209069371 Question Type : MCQ Option Shuffling : No Is Question Mandatory : No Calculator : None Response Time : N.A Think Time : N.A Minimum Instruction Time : 0

Correct Marks : 4 Wrong Marks : 1

If $2^{x-1} + 2^{x+1} = 160$, then x is equal to:

- (1) 2
(3) 5
(2) 6
(4) 4

Options :

92090637021. 1
92090637022. 2
92090637023. 3
92090637024. 4

Question Number : 56 Question Id : 9209069371 Question Type : MCQ Option Shuffling : No Is Question Mandatory : No Calculator : None Response Time : N.A Think Time : N.A Minimum Instruction Time : 0

Correct Marks : 4 Wrong Marks : 1

यदि $2^{x-1} + 2^{x+1} = 160$, तब x किसके समतुल्य है?

- (1) 2
(3) 5
(2) 6
(4) 4

Options :

92090637021. 1
92090637022. 2

92090637023. 3

92090637024. 4

Question Number : 57 Question Id : 9209069372 Question Type : MCQ Option Shuffling : No Is Question Mandatory : No Calculator : None Response Time : N.A Think Time : N.A Minimum Instruction Time : 0

Correct Marks : 4 Wrong Marks : 1

Pankaj fires 6 shots, to Sameer's 2 but Pankaj can hit the balloon only once in 4 shots, while Sameer can hit the balloon once in 2 shots. When Sameer has missed 24 times, how many balloons were hit by Pankaj?

(1) 32

(2) 48

(3) 42

(4) 36

Options :

92090637025. 1

92090637026. 2

92090637027. 3

92090637028. 4

Question Number : 57 Question Id : 9209069372 Question Type : MCQ Option Shuffling : No Is Question Mandatory : No Calculator : None Response Time : N.A Think Time : N.A Minimum Instruction Time : 0

Correct Marks : 4 Wrong Marks : 1

पंकज ने 6 बार निशाना लगाया और समीर ने 2 बार। पंकज के 4 बार निशाना लगाने पर बैलून पर 1 बार आघात लगा जबकि समीर ने 2 बार में 1 बार बैलून पर आघात लगाया। जब समीर 24 बार चूक गया तो पंकज द्वारा कितनी बार बैलून को आघात किया गया ?

(1) 32

(2) 48

(3) 42

(4) 36

Options :

92090637025. 1

92090637026. 2

92090637027. 3

92090637028. 4

Question Number : 58 Question Id : 9209069373 Question Type : MCQ Option Shuffling : No Is Question Mandatory : No Calculator : None Response Time : N.A Think Time : N.A Minimum Instruction Time : 0

Correct Marks : 4 Wrong Marks : 1

If $x*y = 3x - 2y + xy$, then $3*4 + 4*3$ is equal to

- (1) 32 (2) 28
(3) 31 (4) 21

Options :

92090637029. 1
92090637030. 2
92090637031. 3
92090637032. 4

Question Number : 58 Question Id : 9209069373 Question Type : MCQ Option Shuffling : No Is Question Mandatory : No Calculator : None Response Time : N.A Think Time : N.A Minimum Instruction Time : 0

Correct Marks : 4 Wrong Marks : 1

यदि $x*y = 3x - 2y + xy$ तब $3*4 + 4*3$ बराबर है

- (1) 32 (2) 28
(3) 31 (4) 21

Options :

92090637029. 1
92090637030. 2
92090637031. 3
92090637032. 4

Question Number : 59 Question Id : 9209069374 Question Type : MCQ Option Shuffling : No Is Question Mandatory : No Calculator : None Response Time : N.A Think Time : N.A Minimum Instruction Time : 0

Correct Marks : 4 Wrong Marks : 1

'P' starts business with Rs.4500. and after 3 months 'Q' joins with P as his, partner. After a year the profit is divided in the ratio 3:4. What is 'Q's contribution in the capital?

- (1) Rs.8500 (2) Rs.8000
(3) Rs.9000 (4) Rs.8300

Options :

92090637033. 1
92090637034. 2
92090637035. 3
92090637036. 4

Question Number : 59 Question Id : 9209069374 Question Type : MCQ Option Shuffling : No Is Question Mandatory : No Calculator : None Response Time : N.A Think Time : N.A Minimum Instruction Time : 0

Correct Marks : 4 Wrong Marks : 1

'P' ₹.4,500/- से व्यापार आरम्भ करता है और 3 माह पश्चात् 'Q' बतौर साझेदार 'P' के साथ जुड़ जाता है। एक वर्ष उपरान्त लाभ को 3:4 के अनुपात में बांटा जाता है, पूंजी में 'Q' का अंश क्या होगा ?

- | | |
|---------------|---------------|
| (1) ₹.8,500/- | (2) ₹.8,000/- |
| (3) ₹.9,000/- | (4) ₹.8,300/- |

Options :

92090637033. 1
92090637034. 2
92090637035. 3
92090637036. 4

Question Number : 60 Question Id : 9209069375 Question Type : MCQ Option Shuffling : No Is Question Mandatory : No Calculator : None Response Time : N.A Think Time : N.A Minimum Instruction Time : 0

Correct Marks : 4 Wrong Marks : 1

A shopkeeper sold an article at a loss of 25%. If the selling price had been increased by Rs.200, there would have been a gain of 15%. What was the cost price of the article?

- | | |
|------------|------------|
| (1) Rs.500 | (2) Rs.400 |
| (3) Rs.600 | (4) Rs.450 |

Options :

92090637037. 1
92090637038. 2
92090637039. 3
92090637040. 4

Question Number : 60 Question Id : 9209069375 Question Type : MCQ Option Shuffling : No Is Question Mandatory : No Calculator : None Response Time : N.A Think Time : N.A Minimum Instruction Time : 0

Correct Marks : 4 Wrong Marks : 1

एक दुकानदार ने अपनी एक वस्तु 25% घाटे से बिक्री की। यदि विक्रय मूल्य 200/- रु. बढ़ जाता तब 15% का लाभ हो जाता। वस्तु का लागत मूल्य क्या था ?

- | | |
|-------------|-------------|
| (1) ₹.500/- | (2) ₹.400/- |
| (3) ₹.600/- | (4) ₹.450/- |

Options :

92090637037. 1
92090637038. 2
92090637039. 3
92090637040. 4

Question Number : 61 Question Id : 9209069376 Question Type : MCQ Option Shuffling : No Is Question Mandatory : No Calculator : None Response Time : N.A Think Time : N.A Minimum Instruction Time : 0

Correct Marks : 4 Wrong Marks : 1

Fresh grapes contains 76% water and dry grapes contains 20% water. How much dry grapes can be obtained from 100 Kg of fresh grapes?

- | | |
|-----------|-----------|
| (1) 24 Kg | (2) 32 Kg |
| (3) 30 kg | (4) 80 Kg |

Options :

- 92090637041. 1
- 92090637042. 2
- 92090637043. 3
- 92090637044. 4

Question Number : 61 Question Id : 9209069376 Question Type : MCQ Option Shuffling : No Is Question Mandatory : No Calculator : None Response Time : N.A Think Time : N.A Minimum Instruction Time : 0

Correct Marks : 4 Wrong Marks : 1

ताजा अंगूरों में 76% जल होता है और सूखे अंगूर में 20% जल होता है। 100 किलोग्राम ताजा अंगूरों से कितने किलो सूखे अंगूर प्राप्त किए जा सकते हैं?

- | | |
|-----------------|-----------------|
| (1) 24 कि.ग्राम | (2) 32 कि.ग्राम |
| (3) 30 कि.ग्राम | (4) 80 कि.ग्राम |

Options :

- 92090637041. 1
- 92090637042. 2
- 92090637043. 3
- 92090637044. 4

Question Number : 62 Question Id : 9209069377 Question Type : MCQ Option Shuffling : No Is Question Mandatory : No Calculator : None Response Time : N.A Think Time : N.A Minimum Instruction Time : 0

Correct Marks : 4 Wrong Marks : 1

How many kgs of wheat costing Rs.16 per kg must be mixed with 50 kg of bajra costing Rs.10.80 per kg. so that 20% gain may be obtained by selling the mixture at Rs.14.40 per Kg?

- | | |
|-----------|-----------|
| (1) 22 Kg | (2) 25 Kg |
| (3) 15 Kg | (4) 20 Kg |

Options :

- 92090637045. 1
- 92090637046. 2
- 92090637047. 3

92090637048. 4

Question Number : 62 Question Id : 9209069377 Question Type : MCQ Option Shuffling : No Is Question Mandatory : No Calculator : None Response Time : N.A Think Time : N.A Minimum Instruction Time : 0

Correct Marks : 4 Wrong Marks : 1

रु.10.80 प्रति किलोग्राम वाले 50 किलोग्राम बाजरे में रु.16.00 प्रति किलोग्राम मूल्य वाला कितना किलोग्राम गेहूँ मिलाया जाएगा कि उक्त मिश्रण को रु.14.40 प्रतिकिलोग्राम की दर से बेचने पर 20% का लाभ प्राप्त किया जाए?

- | | |
|------------------|------------------|
| (1) 22 किलोग्राम | (2) 25 किलोग्राम |
| (3) 15 किलोग्राम | (4) 20 किलोग्राम |

Options :

92090637045. 1
92090637046. 2
92090637047. 3
92090637048. 4

Question Number : 63 Question Id : 9209069378 Question Type : MCQ Option Shuffling : No Is Question Mandatory : No Calculator : None Response Time : N.A Think Time : N.A Minimum Instruction Time : 0

Correct Marks : 4 Wrong Marks : 1

A tin of oil was $\frac{4}{5}$ full, when 10 bottles of oil were taken out and 6 bottles of oil were poured into it, it was $\frac{2}{3}$ full. How many bottles of oil can the tin contain?

- | | |
|--------|--------|
| (1) 20 | (2) 24 |
| (3) 30 | (4) 28 |

Options :

92090637049. 1
92090637050. 2
92090637051. 3
92090637052. 4

Question Number : 63 Question Id : 9209069378 Question Type : MCQ Option Shuffling : No Is Question Mandatory : No Calculator : None Response Time : N.A Think Time : N.A Minimum Instruction Time : 0

Correct Marks : 4 Wrong Marks : 1

तेल का एक टिन $\frac{4}{5}$ भरा था, जब तेल की 10 बोतलें उसमें से निकाल ली गईं, फिर उसमें 6 बोतल तेल डाल दिया गया

तब यह $\frac{2}{3}$ भरा हुआ था। उक्त टिन में तेल की कितनी बोतलें होंगी ?

- | | |
|--------|--------|
| (1) 20 | (2) 24 |
| (3) 30 | (4) 28 |

Options :

92090637049. 1
92090637050. 2
92090637051. 3
92090637052. 4

Question Number : 64 Question Id : 9209069379 Question Type : MCQ Option Shuffling : No Is Question Mandatory : No Calculator : None Response Time : N.A Think Time : N.A Minimum Instruction Time : 0

Correct Marks : 4 Wrong Marks : 1

One pipe can fill a tank four times as fast as another pipe. If together the two pipes can fill the tank in 48 minutes, then the shower pipe alone will be able to fill the tank in

- (1) 3 hours (2) 4 hours
(3) 5 hours (4) 2 hours

Options :

92090637053. 1
92090637054. 2
92090637055. 3
92090637056. 4

Question Number : 64 Question Id : 9209069379 Question Type : MCQ Option Shuffling : No Is Question Mandatory : No Calculator : None Response Time : N.A Think Time : N.A Minimum Instruction Time : 0

Correct Marks : 4 Wrong Marks : 1

एक पाइप दूसरे पाइप से चार गुना गति से एक टैंक को भर सकता है। यदि दोनों पाइप एक साथ टैंक को 48 मिनट में भरते हैं, तो केवल मंद गति वाला पाइप कितने समय में भरेगा?

- (1) 3 घंटे (2) 4 घंटे
(3) 5 घंटे (4) 2 घंटे

Options :

92090637053. 1
92090637054. 2
92090637055. 3
92090637056. 4

Question Number : 65 Question Id : 9209069380 Question Type : MCQ Option Shuffling : No Is Question Mandatory : No Calculator : None Response Time : N.A Think Time : N.A Minimum Instruction Time : 0

Correct Marks : 4 Wrong Marks : 1

A man running at 8 Km/hr. along side a railway track is 320m ahead of the engine of a 130 meter long train running at 62 Km/hr. in the same direction. In how much time will the train pass that running man?

- (1) 32 seconds (2) 30 seconds
(3) 50 seconds (4) 31 seconds

Options :

92090637057. 1
92090637058. 2
92090637059. 3
92090637060. 4

Question Number : 65 Question Id : 9209069380 Question Type : MCQ Option Shuffling : No Is Question Mandatory : No Calculator : None Response Time : N.A Think Time : N.A Minimum Instruction Time : 0

Correct Marks : 4 Wrong Marks : 1

एक व्यक्ति 8 किलोमीटर प्रति घंटे की रफतार से रेलवे ट्रैक के साथ 130 मीटर लंबी ट्रेन के इंजन से 320 मी. आगे उसी दिशा में दौड़ रहा था। कितने समय में ट्रेन उस दौड़ते व्यक्ति से आगे निकल जाएगी ?

- (1) 32 सैकेण्ड (2) 30 सैकेण्ड
(3) 50 सैकेण्ड (4) 31 सैकेण्ड

Options :

92090637057. 1
92090637058. 2
92090637059. 3
92090637060. 4

Question Number : 66 Question Id : 9209069381 Question Type : MCQ Option Shuffling : No Is Question Mandatory : No Calculator : None Response Time : N.A Think Time : N.A Minimum Instruction Time : 0

Correct Marks : 4 Wrong Marks : 1

The sum of the ages of a daughter and her Mother is 64 years. After six years the age of the Mother will be three times that of the Daughter. The ages of Mother & Daughter at present are

- (1) 46 years, 12 years (2) 54 years, 11 years
(3) 51 years, 13 years (4) 58 years, 13 years

Options :

92090637061. 1
92090637062. 2
92090637063. 3
92090637064. 4

Question Number : 66 Question Id : 9209069381 Question Type : MCQ Option Shuffling : No Is Question Mandatory : No Calculator : None Response Time : N.A Think Time : N.A Minimum Instruction Time : 0

Correct Marks : 4 Wrong Marks : 1

एक पुत्री और माता की आयु का योग 64 वर्ष है। 6 वर्ष के पश्चात् माता की आयु पुत्री से तीन गुना हो जाएगी। वर्तमान में माता और पुत्री की आयु क्या हैं?

- | | |
|----------------------|----------------------|
| (1) 46 वर्ष, 12 वर्ष | (2) 54 वर्ष, 11 वर्ष |
| (3) 51 वर्ष, 13 वर्ष | (4) 58 वर्ष, 13 वर्ष |

Options :

- 92090637061. 1
- 92090637062. 2
- 92090637063. 3
- 92090637064. 4

Question Number : 67 Question Id : 9209069382 Question Type : MCQ Option Shuffling : No Is Question Mandatory : No Calculator : None Response Time : N.A Think Time : N.A Minimum Instruction Time : 0

Correct Marks : 4 Wrong Marks : 1

Rani lent Rs.8000 to Seeta for 2 years and Rs.5000 to Tina for 4 years on simple Interest at the same rate of interest and received Rs.3600 in all from both of them an interest. The rate of interest per annum is:

- | | |
|--------|---------|
| (1) 5% | (2) 8% |
| (3) 9% | (4) 10% |

Options :

- 92090637065. 1
- 92090637066. 2
- 92090637067. 3
- 92090637068. 4

Question Number : 67 Question Id : 9209069382 Question Type : MCQ Option Shuffling : No Is Question Mandatory : No Calculator : None Response Time : N.A Think Time : N.A Minimum Instruction Time : 0

Correct Marks : 4 Wrong Marks : 1

रानी ने शीला को 28,000/-, 2 वर्षों के लिए दिए और रु.5,000/- टीना को 4 वर्षों के लिए साधारण ब्याज पर दिए, ब्याज की उसी दर से दोनों से कुल मिलाकर रु.3,600/- ब्याज के रूप में प्राप्त हुए। प्रतिवर्ष ब्याज की दर क्या होगी?

- | | |
|--------|---------|
| (1) 5% | (2) 8% |
| (3) 9% | (4) 10% |

Options :

- 92090637065. 1
- 92090637066. 2

92090637067. 3

92090637068. 4

Question Number : 68 Question Id : 9209069383 Question Type : MCQ Option Shuffling : No Is Question Mandatory : No Calculator : None Response Time : N.A Think Time : N.A Minimum Instruction Time : 0

Correct Marks : 4 Wrong Marks : 1

PQRS is a parallelogram and M is any point within it. If the area of the parallelogram PQRS is 40 Units, then what is the sum of the areas of the ΔSMR and ΔPMQ ?

(1) 15

(2) 20

(3) 25

(4) 30

Options :

92090637069. 1

92090637070. 2

92090637071. 3

92090637072. 4

Question Number : 68 Question Id : 9209069383 Question Type : MCQ Option Shuffling : No Is Question Mandatory : No Calculator : None Response Time : N.A Think Time : N.A Minimum Instruction Time : 0

Correct Marks : 4 Wrong Marks : 1

PQRS एक समांतर चतुर्भुज है और इसके अन्तःभाग में M एक बिन्दु है। यदि समांतर चतुर्भुज PQRS का क्षेत्रफल 40 यूनिट है, तब ΔSMR और ΔPMQ के क्षेत्रफल का योग क्या होगा ?

(1) 15

(2) 20

(3) 25

(4) 30

Options :

92090637069. 1

92090637070. 2

92090637071. 3

92090637072. 4

Question Number : 69 Question Id : 9209069384 Question Type : MCQ Option Shuffling : No Is Question Mandatory : No Calculator : None Response Time : N.A Think Time : N.A Minimum Instruction Time : 0

Correct Marks : 4 Wrong Marks : 1

In a class of 60 students, 70% students pass in maths and 60% pass in English. What is the minimum percentage of students who pass in both the papers:

(1) 50%

(2) 40%

(3) 30%

(4) 20%

Options :

92090637073. 1

92090637074. 2

92090637075. 3

92090637076. 4

Question Number : 69 Question Id : 9209069384 Question Type : MCQ Option Shuffling : No Is Question Mandatory : No Calculator : None Response Time : N.A Think Time : N.A Minimum Instruction Time : 0

Correct Marks : 4 Wrong Marks : 1

एक कक्षा में 60 विद्यार्थी हैं, गणित में 70% विद्यार्थी उत्तीर्ण और अंग्रेजी में 60% उत्तीर्ण होते हैं। विद्यार्थियों का न्यूनतम प्रतिशत क्या है जो कि दोनों विषयों में उत्तीर्ण हुए।

(1) 50%

(2) 40%

(3) 30%

(4) 20%

Options :

92090637073. 1

92090637074. 2

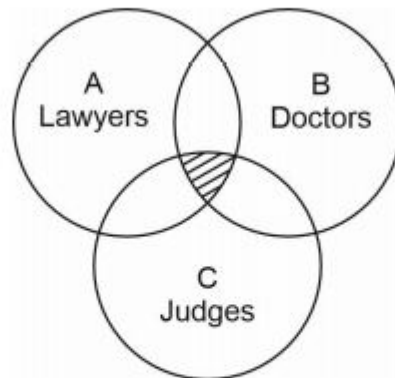
92090637075. 3

92090637076. 4

Question Number : 70 Question Id : 9209069385 Question Type : MCQ Option Shuffling : No Is Question Mandatory : No Calculator : None Response Time : N.A Think Time : N.A Minimum Instruction Time : 0

Correct Marks : 4 Wrong Marks : 1

The shaded region represents: (Given A, B, C circles represents lawyers, doctor and judges respectively).



(1) Lawyers and Doctors

(2) Doctors and Judges

(3) Lawyers and Judges

(4) Judges who are lawyers as well as Doctors

Options :

92090637077. 1

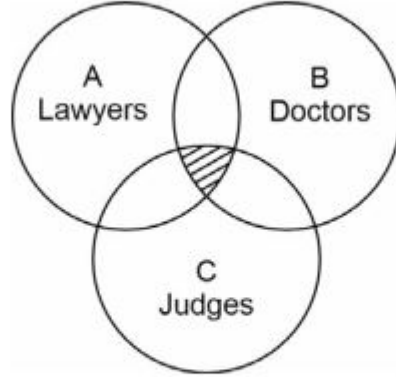
92090637078. 2

92090637079. 3

Question Number : 70 Question Id : 9209069385 Question Type : MCQ Option Shuffling : No Is Question Mandatory : No Calculator : None Response Time : N.A Think Time : N.A Minimum Instruction Time : 0

Correct Marks : 4 Wrong Marks : 1

छायाचित्र प्रतिनिधित्व करता है - दिए गए A, B, C वृत्त क्रमशः प्रतिनिधित्व कर रहे हैं: अधिवक्ता, चिकित्सक और न्यायाधीश का



- (1) अधिवक्ता और चिकित्सक
- (2) चिकित्सक और न्यायाधीश
- (3) अधिवक्ता और न्यायाधीश
- (4) न्यायाधीश जो कि अधिवक्ता के साथ-साथ चिकित्सक हैं।

Options :

92090637077. 1
92090637078. 2
92090637079. 3
92090637080. 4

Question Number : 71 Question Id : 9209069386 Question Type : MCQ Option Shuffling : No Is Question Mandatory : No Calculator : None Response Time : N.A Think Time : N.A Minimum Instruction Time : 0

Correct Marks : 4 Wrong Marks : 1

Set A represents girls of class eight, set B represents boys of class eight, set C represents students of class eight, The diagram which correctly represents A,B and C as:

- | | |
|-----------------------------|------------------------------|
| (1) $A \cup B = C$ | (2) $A \cap B = C$ |
| (3) $A \cup (B \cap C) = C$ | (4) $A \cup B \cup C \neq C$ |

Options :

92090637081. 1
92090637082. 2
92090637083. 3
92090637084. 4

Question Number : 71 Question Id : 9209069386 Question Type : MCQ Option Shuffling : No Is Question Mandatory : No Calculator : None Response Time : N.A Think Time : N.A Minimum Instruction Time : 0

Correct Marks : 4 Wrong Marks : 1

सेट A आठवीं कक्षा की बालिकाओं का प्रतिनिधित्व करता है, सेट B आठवीं कक्षा के बालकों का प्रतिनिधित्व करता है, सेट C – आठवीं कक्षा के विद्यार्थियों का प्रतिनिधित्व करता है। आरेख जो सटीक रूप से A, B और C का प्रतिनिधित्व करता है –

- (1) $A \cup B = C$ (2) $A \cap B = C$
(3) $A \cup (B \cap C) = C$ (4) $A \cup B \cup C = C$

Options :

92090637081. 1
92090637082. 2
92090637083. 3
92090637084. 4

Question Number : 72 Question Id : 9209069387 Question Type : MCQ Option Shuffling : No Is Question Mandatory : No Calculator : None Response Time : N.A Think Time : N.A Minimum Instruction Time : 0

Correct Marks : 4 Wrong Marks : 1

There are 12 intermediate bus stops between two places A and B. In how many ways can a bus be made to stop at 4 of these 12 intermediate bus stops provided no two of them are consecutive?

- (1) 108 (2) 63
(3) 126 (4) 252

Options :

92090637085. 1
92090637086. 2
92090637087. 3
92090637088. 4

Question Number : 72 Question Id : 9209069387 Question Type : MCQ Option Shuffling : No Is Question Mandatory : No Calculator : None Response Time : N.A Think Time : N.A Minimum Instruction Time : 0

Correct Marks : 4 Wrong Marks : 1

A और B दो स्थानों के बीच 12 बस स्टॉप हैं। कितनी प्रकार से 12 बस स्टॉप बन सकते हैं, इनमें 4 जगह बस रुक सकती है बशर्ते कि कोई भी दो क्रमागत नहीं हो।

- (1) 108 (2) 63
(3) 126 (4) 252

Options :

92090637085. 1

92090637086. 2

92090637087. 3

92090637088. 4

Question Number : 73 Question Id : 9209069388 Question Type : MCQ Option Shuffling : No Is Question Mandatory : No Calculator : None Response Time : N.A Think Time : N.A Minimum Instruction Time : 0

Correct Marks : 4 Wrong Marks : 1

Ten points are marked on a straight line and 11 points are marked on another parallel straight line. How many triangles can be constructed with vertices among the above points?

(1) 9900

(2) 1100

(3) 1045

(4) 1054

Options :

92090637089. 1

92090637090. 2

92090637091. 3

92090637092. 4

Question Number : 73 Question Id : 9209069388 Question Type : MCQ Option Shuffling : No Is Question Mandatory : No Calculator : None Response Time : N.A Think Time : N.A Minimum Instruction Time : 0

Correct Marks : 4 Wrong Marks : 1

दस अंक चिह्नित किए गए हैं एक सीधी रेखा पर और 11 अंक चिह्नित किए गए दूसरी समानांतर सीधी रेखा पर। उपयुक्त अंकों के बीच में शीश के साथ कितने त्रिकोण निर्मित किए जा सकते हैं।

(1) 9900

(2) 1100

(3) 1045

(4) 1054

Options :

92090637089. 1

92090637090. 2

92090637091. 3

92090637092. 4

Question Number : 74 Question Id : 9209069389 Question Type : MCQ Option Shuffling : No Is Question Mandatory : No Calculator : None Response Time : N.A Think Time : N.A Minimum Instruction Time : 0

Correct Marks : 4 Wrong Marks : 1

Area of a circular pond is 616 m^2 . At the centre of the pond a circular stage is made whose radius is equal to half of the radius of the pond. The area where in water in present is:

(1) 562 Sq. m

(2) 458 Sq. m

(3) 231 Sq. m

(4) 462 Sq. m

Options :

92090637093. 1
92090637094. 2
92090637095. 3
92090637096. 4

Question Number : 74 Question Id : 9209069389 Question Type : MCQ Option Shuffling : No Is Question Mandatory : No Calculator : None Response Time : N.A Think Time : N.A Minimum Instruction Time : 0

Correct Marks : 4 Wrong Marks : 1

एक वृताकार तालाब का क्षेत्रफल 616 m^2 है। तालाब के केन्द्र में एक वृताकार मंच निर्माण करना है, उसका घेरा तालाब के घेरे से आधा है। वह क्षेत्रफल बताएँ जहाँ कि जल उपलब्ध है:

- (1) 562 Sq. m (2) 458 Sq. m
(3) 231 Sq. m (4) 462 Sq. m

Options :

92090637093. 1
92090637094. 2
92090637095. 3
92090637096. 4

Question Number : 75 Question Id : 9209069390 Question Type : MCQ Option Shuffling : No Is Question Mandatory : No Calculator : None Response Time : N.A Think Time : N.A Minimum Instruction Time : 0

Correct Marks : 4 Wrong Marks : 1

In what ratio must water be mixed with milk to gain 30% by selling the mixture at cost price:

- (1) 2 : 5 (2) 1 : 5
(3) 3 : 10 (4) 2 : 9

Options :

92090637097. 1
92090637098. 2
92090637099. 3
92090637100. 4

Question Number : 75 Question Id : 9209069390 Question Type : MCQ Option Shuffling : No Is Question Mandatory : No Calculator : None Response Time : N.A Think Time : N.A Minimum Instruction Time : 0

Correct Marks : 4 Wrong Marks : 1

किस अनुपात में दूध में जल मिलाएंगे कि उक्त मिश्रण को बेचने से लागत मूल्य का 30% लाभ प्राप्त हो।

- (1) 2 : 5 (2) 1 : 5
(3) 3 : 10 (4) 2 : 9

Options :

92090637097. 1
92090637098. 2
92090637099. 3
92090637100. 4

Question Number : 76 Question Id : 9209069391 Question Type : MCQ Option Shuffling : No Is Question Mandatory : No Calculator : None Response Time : N.A Think Time : N.A Minimum Instruction Time : 0

Correct Marks : 4 Wrong Marks : 1

B, D, E, F and L have different weights. E is heavier than D but lighter than B. L is heavier than F but lighter than D. The heaviest one is:

- (1) L (2) B
(3) D (4) F

Options :

92090637101. 1
92090637102. 2
92090637103. 3
92090637104. 4

Question Number : 76 Question Id : 9209069391 Question Type : MCQ Option Shuffling : No Is Question Mandatory : No Calculator : None Response Time : N.A Think Time : N.A Minimum Instruction Time : 0

Correct Marks : 4 Wrong Marks : 1

B, D, E, F और L का भिन्न-भिन्न भार है। E-D से भारी है किन्तु B से हल्का है, L, F से भारी है किन्तु D से हल्का है। सर्वाधिक भारी कौन सा है ?

- (1) L (2) B
(3) D (4) F

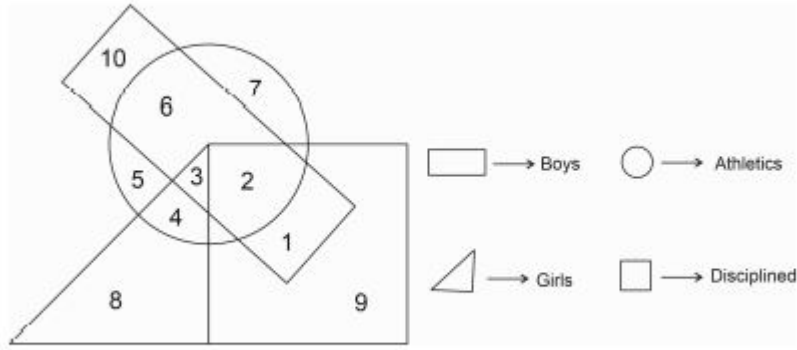
Options :

92090637101. 1
92090637102. 2
92090637103. 3
92090637104. 4

Question Number : 77 Question Id : 9209069392 Question Type : MCQ Option Shuffling : No Is Question Mandatory : No Calculator : None Response Time : N.A Think Time : N.A Minimum Instruction Time : 0

Correct Marks : 4 Wrong Marks : 1

In the following Diagram, Boys who are not athletes but are disciplined are indicated by which number?



- (1) Both 1 and 10
 (2) 2 only
 (3) 1 only
 (4) Both 1 and 2

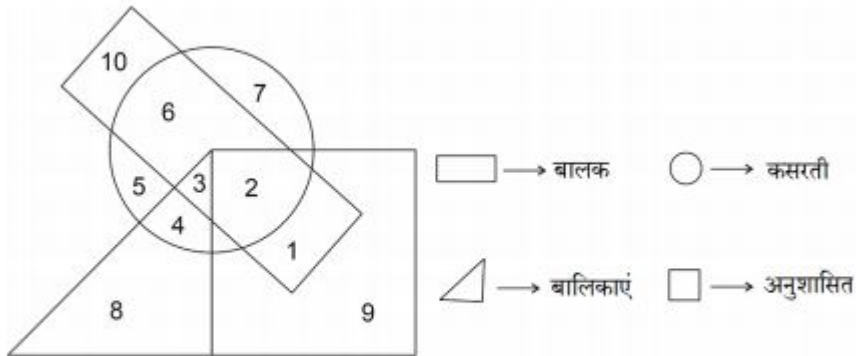
Options :

92090637105. 1
 92090637106. 2
 92090637107. 3
 92090637108. 4

Question Number : 77 Question Id : 9209069392 Question Type : MCQ Option Shuffling : No Is Question Mandatory : No Calculator : None Response Time : N.A Think Time : N.A Minimum Instruction Time : 0

Correct Marks : 4 Wrong Marks : 1

दर्शाए गए आरेख में जो बालक कसरती नहीं है किन्तु अनुशासित है कि संख्या में निर्दिष्ट है।



- (1) 1 और 10 दोनों
 (2) केवल 2
 (3) केवल 1
 (4) 1 और 2 दोनों

Options :

92090637105. 1
 92090637106. 2
 92090637107. 3
 92090637108. 4

Question Number : 78 Question Id : 9209069393 Question Type : MCQ Option Shuffling : No Is Question Mandatory : No Calculator : None Response Time : N.A Think Time : N.A Minimum Instruction Time : 0

Correct Marks : 4 Wrong Marks : 1

If Sita is at the east of Mala : Mala is at the North of Sapna and Sapna is at the North of Shobha. Find the position of Sita with respect to Shobha

- | | |
|----------------|----------------|
| (1) South-west | (2) North-East |
| (3) North-west | (4) South-East |

Options :

92090637109. 1
92090637110. 2
92090637111. 3
92090637112. 4

Question Number : 78 Question Id : 9209069393 Question Type : MCQ Option Shuffling : No Is Question Mandatory : No Calculator : None Response Time : N.A Think Time : N.A Minimum Instruction Time : 0

Correct Marks : 4 Wrong Marks : 1

यदि सीता माला से पूर्व में है, माला सपना से उत्तर में है और सपना, शोभा के उत्तर में है। शोभा के संदर्भ में सीता की स्थिति का पता लगाएं :

- | | |
|-------------------|------------------|
| (1) दक्षिण-पश्चिम | (2) उत्तर-पूर्व |
| (3) उत्तर-पश्चिम | (4) दक्षिण-पूर्व |

Options :

92090637109. 1
92090637110. 2
92090637111. 3
92090637112. 4

Question Number : 79 Question Id : 9209069394 Question Type : MCQ Option Shuffling : No Is Question Mandatory : No Calculator : None Response Time : N.A Think Time : N.A Minimum Instruction Time : 0

Correct Marks : 4 Wrong Marks : 1

On a stage Suman, Neeraj ,Pankaj, Vinay and Vikram are standing in the north direction as described below.

- (I) Neeraj is south of Vinay
- (II) Suman is south of Neeraj
- (III) Pankaj is west of Vinay
- (IV) Vikram is North of Suman

Who is the extreme west ?

- (1) Vikram
- (2) Pankaj
- (3) Suman
- (4) Vinay

Options :

- 92090637113. 1
- 92090637114. 2
- 92090637115. 3
- 92090637116. 4

Question Number : 79 Question Id : 9209069394 Question Type : MCQ Option Shuffling : No Is Question Mandatory : No Calculator : None Response Time : N.A Think Time : N.A Minimum Instruction Time : 0

Correct Marks : 4 Wrong Marks : 1

एक मंच पर उत्तर दिशा में सुमन, नीरज, पंकज, विनय और विक्रम नीचे दिए गए विवरणानुसार खड़े हैं:

- (I) नीरज, विनय के दक्षिण में है।
- (II) सुमन, नीरज के दक्षिण में है।
- (III) पंकज, विनय के पश्चिम में है।
- (IV) विक्रम, सुमन के उत्तर में है।

धूर पश्चिम में कौन है ?

- (1) विक्रम
- (2) पंकज
- (3) सुमन
- (4) विनय

Options :

- 92090637113. 1
- 92090637114. 2
- 92090637115. 3
- 92090637116. 4

Question Number : 80 Question Id : 9209069395 Question Type : MCQ Option Shuffling : No Is Question Mandatory : No Calculator : None Response Time : N.A Think Time : N.A Minimum

Instruction Time : 0

Correct Marks : 4 Wrong Marks : 1

Which word can not be formed by using the letters from the given word GEMDISTIONARY?

- | | |
|--------------|---------------|
| (1) MEGASITY | (2) RESTARTED |
| (3) STAR | (4) GAME |

Options :

- 92090637117. 1
- 92090637118. 2
- 92090637119. 3
- 92090637120. 4

Question Number : 80 Question Id : 9209069395 Question Type : MCQ Option Shuffling : No Is Question Mandatory : No Calculator : None Response Time : N.A Think Time : N.A Minimum Instruction Time : 0

Correct Marks : 4 Wrong Marks : 1

दिया गया शब्द GEMDISTIONARY है - इसका उपयोग करके इनमें से कौन सा शब्द नहीं बना सकते हैं?

- | | |
|--------------|---------------|
| (1) MEGASITY | (2) RESTARTED |
| (3) STAR | (4) GAME |

Options :

- 92090637117. 1
- 92090637118. 2
- 92090637119. 3
- 92090637120. 4

Question Number : 81 Question Id : 9209069396 Question Type : MCQ Option Shuffling : No Is Question Mandatory : No Calculator : None Response Time : N.A Think Time : N.A Minimum Instruction Time : 0

Correct Marks : 4 Wrong Marks : 1

Complete the following number series. 1, 8, 27, 64, 125, 216,

- | | |
|---------|---------|
| (1) 256 | (2) 343 |
| (3) 365 | (4) 400 |

Options :

- 92090637121. 1
- 92090637122. 2
- 92090637123. 3
- 92090637124. 4

Question Number : 81 Question Id : 9209069396 Question Type : MCQ Option Shuffling : No Is Question Mandatory : No Calculator : None Response Time : N.A Think Time : N.A Minimum

Instruction Time : 0

Correct Marks : 4 Wrong Marks : 1

निम्नांकित अंक श्रृंखला को पूर्ण करें:

1, 8, 27, 64, 125, 216,.....

(1) 256

(2) 343

(3) 365

(4) 400

Options :

92090637121. 1

92090637122. 2

92090637123. 3

92090637124. 4

Question Number : 82 Question Id : 9209069397 Question Type : MCQ Option Shuffling : No Is Question Mandatory : No Calculator : None Response Time : N.A Think Time : N.A Minimum Instruction Time : 0

Correct Marks : 4 Wrong Marks : 1

Find odd one out in the given series. 2, 3, 5, 8, 11, 26, 23, 105

(1) 11

(2) 23

(3) 105

(4) 8

Options :

92090637125. 1

92090637126. 2

92090637127. 3

92090637128. 4

Question Number : 82 Question Id : 9209069397 Question Type : MCQ Option Shuffling : No Is Question Mandatory : No Calculator : None Response Time : N.A Think Time : N.A Minimum Instruction Time : 0

Correct Marks : 4 Wrong Marks : 1

दी गई श्रृंखला में श्रृंखला से डालना ज्ञात करें -

2, 3, 5, 8, 11, 26, 23, 105

(1) 11

(2) 23

(3) 105

(4) 8

Options :

92090637125. 1

92090637126. 2

92090637127. 3

92090637128. 4

Question Number : 83 Question Id : 9209069398 Question Type : MCQ Option Shuffling : No Is Question Mandatory : No Calculator : None Response Time : N.A Think Time : N.A Minimum Instruction Time : 0

Correct Marks : 4 Wrong Marks : 1

Answer the following question based on the information given below.

- (A) 'P×Q' means 'P' is father of Q
- (B) P-Q means 'P' is sister of Q
- (C) 'P+Q' means 'P' is mother Q
- (D) 'P÷Q' means 'P' is brother of Q

Then $B+D \times M \div N$, how is M related to B

- (1) Grand Father
- (2) Son
- (3) Grandson
- (4) Grandmother

Options :

- 92090637129. 1
- 92090637130. 2
- 92090637131. 3
- 92090637132. 4

Question Number : 83 Question Id : 9209069398 Question Type : MCQ Option Shuffling : No Is Question Mandatory : No Calculator : None Response Time : N.A Think Time : N.A Minimum Instruction Time : 0

Correct Marks : 4 Wrong Marks : 1

नीचे दी गई जानकारी के आधार पर निम्नांकित प्रश्नों का उत्तर दें -

- (A) 'P×Q' अर्थात् 'Q' का 'P' पिता है।
- (B) P-Q अर्थात् 'Q' की 'P' बहन है।
- (C) 'P+Q' अर्थात् 'Q' की 'P' माता है।
- (D) 'P÷Q' अर्थात् 'Q' का 'P' भाई है।

तब - $B+D \times M \div N$, किस प्रकार से M संबंधित है B से

- (1) दादा/नाना
- (2) पुत्र
- (3) पौत्र
- (4) दादी/नानी

Options :

- 92090637129. 1
- 92090637130. 2
- 92090637131. 3
- 92090637132. 4

Question Number : 84 Question Id : 9209069399 Question Type : MCQ Option Shuffling : No Is Question Mandatory : No Calculator : None Response Time : N.A Think Time : N.A Minimum Instruction Time : 0

Correct Marks : 4 Wrong Marks : 1

In a group a 40 people, 25 speak English and 20 speak both Hindi and English. All the people speak at least one of the two language. How many people speak Hindi?

- | | |
|--------|--------|
| (1) 15 | (2) 20 |
| (3) 25 | (4) 30 |

Options :

- 92090637133. 1
- 92090637134. 2
- 92090637135. 3
- 92090637136. 4

Question Number : 84 Question Id : 9209069399 Question Type : MCQ Option Shuffling : No Is Question Mandatory : No Calculator : None Response Time : N.A Think Time : N.A Minimum Instruction Time : 0

Correct Marks : 4 Wrong Marks : 1

40 लोगों के एक समूह में 25 अंग्रेजी बोलते हैं और 20 हिन्दी अंग्रेजी दोनों भाषाएं बोलते हैं। सभी लोग दो भाषाओं में से कम से कम एक भाषा बोलते हैं। कितने लोग हिन्दी बोलते हैं?

- | | |
|--------|--------|
| (1) 15 | (2) 20 |
| (3) 25 | (4) 30 |

Options :

- 92090637133. 1
- 92090637134. 2
- 92090637135. 3
- 92090637136. 4

Question Number : 85 Question Id : 9209069400 Question Type : MCQ Option Shuffling : No Is Question Mandatory : No Calculator : None Response Time : N.A Think Time : N.A Minimum Instruction Time : 0

Correct Marks : 4 Wrong Marks : 1

On which day Ajay went to Delhi if week starts on Monday

Statements

- I. Ajay took leave on Wednesday
- II. Suresh went to Delhi the next day of the day his mother came to his house
- III. Suresh's mother came to his house neither on Monday nor Friday

- (1) II and III
- (2) I and II
- (3) III and I
- (4) Even I, II and III together are not sufficient

Options :

- 92090637137. 1
- 92090637138. 2
- 92090637139. 3
- 92090637140. 4

Question Number : 85 Question Id : 9209069400 Question Type : MCQ Option Shuffling : No Is Question Mandatory : No Calculator : None Response Time : N.A Think Time : N.A Minimum Instruction Time : 0

Correct Marks : 4 Wrong Marks : 1

किस दिन अजय दिल्ली गया, यदि सप्ताह सोमवार से आरम्भ होता है

कथन I – अजय ने बुधवार को छुट्टी ली थी।

II – सुरेश दिल्ली गया अपनी माता के घर आगमन के आगामी दिवस।

III – सुरेश की माता उसके घर न तो सोमवार और न ही शुक्रवार को आई।

- (1) II और III
- (2) I और II
- (3) III और I
- (4) यहाँ तक कि I, II और III एक साथ पर्याप्त नहीं है।

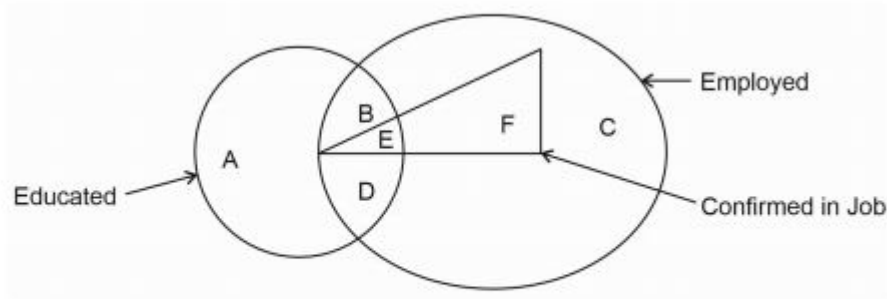
Options :

- 92090637137. 1
- 92090637138. 2
- 92090637139. 3
- 92090637140. 4

Question Number : 86 Question Id : 9209069401 Question Type : MCQ Option Shuffling : No Is Question Mandatory : No Calculator : None Response Time : N.A Think Time : N.A Minimum Instruction Time : 0

Correct Marks : 4 Wrong Marks : 1

Region showing educated employed but not confirmed in job is



- (1) A
- (2) B, D
- (3) A, B, C
- (4) A, C

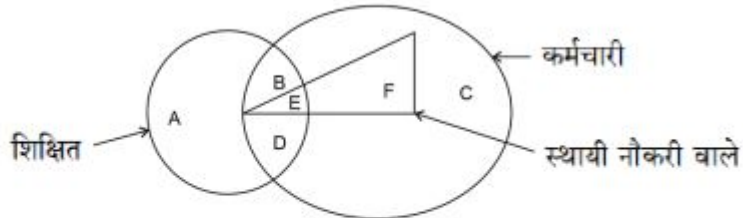
Options :

92090637141. 1
92090637142. 2
92090637143. 3
92090637144. 4

Question Number : 86 Question Id : 9209069401 Question Type : MCQ Option Shuffling : No Is Question Mandatory : No Calculator : None Response Time : N.A Think Time : N.A Minimum Instruction Time : 0

Correct Marks : 4 Wrong Marks : 1

क्षेत्र जो दर्शाता है: शिक्षित, कर्मचारी किंतु स्थायी नौकरी वाले नहीं -



- (1) A
- (2) B, D
- (3) A, B, C
- (4) A, C

Options :

92090637141. 1
92090637142. 2
92090637143. 3
92090637144. 4

Question Number : 87 Question Id : 9209069402 Question Type : MCQ Option Shuffling : No Is Question Mandatory : No Calculator : None Response Time : N.A Think Time : N.A Minimum Instruction Time : 0

Correct Marks : 4 Wrong Marks : 1

In a certain language MINERAL is coded RSTUVWZ and Sound is coded as FGHIJ then how READER will be coded:-

- (1) VWASTU
- (2) WXYZAD
- (3) VUWJUV
- (4) UVWXYZ

Options :

92090637145. 1
92090637146. 2
92090637147. 3
92090637148. 4

Question Number : 87 Question Id : 9209069402 Question Type : MCQ Option Shuffling : No Is Question Mandatory : No Calculator : None Response Time : N.A Think Time : N.A Minimum Instruction Time : 0

Correct Marks : 4 Wrong Marks : 1

कुछ भाषाओं में खनिज को RSTUVWZ के रूप में कूटबद्ध किया जाता है और ध्वनि को FGHIJ के रूप में कूटबद्ध तो पाठक कैसे कूटबद्ध होंगे ?

- (1) VWASTU
- (2) WXYZAD
- (3) VUWJUV
- (4) UVWXYZ

Options :

92090637145. 1
92090637146. 2
92090637147. 3
92090637148. 4

Question Number : 88 Question Id : 9209069403 Question Type : MCQ Option Shuffling : No Is Question Mandatory : No Calculator : None Response Time : N.A Think Time : N.A Minimum Instruction Time : 0

Correct Marks : 4 Wrong Marks : 1

P is Q's brother. R is Q's mother. S is R's father. T is S's mother. Then, how is P related to S?

- (1) Grandfather
- (2) Grandmother
- (3) Son
- (4) Grand son

Options :

92090637149. 1
92090637150. 2

92090637151. 3

92090637152. 4

Question Number : 88 Question Id : 9209069403 Question Type : MCQ Option Shuffling : No Is Question Mandatory : No Calculator : None Response Time : N.A Think Time : N.A Minimum Instruction Time : 0

Correct Marks : 4 Wrong Marks : 1

P-Q का भाई है। R-Q की माता, S-R का पिता, T-S की माता है तब P-S का रिश्ता क्या है?

- | | |
|---------------|-----------------|
| (1) दादा/नाना | (2) दादी/नानी |
| (3) पुत्र | (4) पौत्र/घेवता |

Options :

92090637149. 1

92090637150. 2

92090637151. 3

92090637152. 4

Question Number : 89 Question Id : 9209069404 Question Type : MCQ Option Shuffling : No Is Question Mandatory : No Calculator : None Response Time : N.A Think Time : N.A Minimum Instruction Time : 0

Correct Marks : 4 Wrong Marks : 1

If in a certain code 'I will work hard' is written as 'sil nil ma yo', 'hard work pays' is written as 'nil ga yo' and 'I work smartly' is written as 'po nil ma', then what is the code word for 'hard'?

- | |
|---------|
| (1) yo |
| (2) nil |
| (3) po |
| (4) ma |

Options :

92090637153. 1

92090637154. 2

92090637155. 3

92090637156. 4

Question Number : 89 Question Id : 9209069404 Question Type : MCQ Option Shuffling : No Is Question Mandatory : No Calculator : None Response Time : N.A Think Time : N.A Minimum Instruction Time : 0

Correct Marks : 4 Wrong Marks : 1

एक तरह के कोड वर्ड में 'I will work hard' को 'sil nil ma yo' लिखा गया है, 'hard work pays' को 'nil ga yo' लिखा गया है और 'I work smartly' को 'po nil ma' लिखा गया है, तो 'hard' का कोड वर्ड क्या है?

- (1) yo
- (2) nil
- (3) po
- (4) ma

Options :

92090637153. 1
92090637154. 2
92090637155. 3
92090637156. 4

Question Number : 90 Question Id : 9209069405 Question Type : MCQ Option Shuffling : No Is Question Mandatory : No Calculator : None Response Time : N.A Think Time : N.A Minimum Instruction Time : 0

Correct Marks : 4 Wrong Marks : 1

Complete the following letter series ELFT, GLHT,----MLNT

- (1) OLPT
- (2) LLMT
- (3) KLMT
- (4) KLLT

Options :

92090637157. 1
92090637158. 2
92090637159. 3
92090637160. 4

Question Number : 90 Question Id : 9209069405 Question Type : MCQ Option Shuffling : No Is Question Mandatory : No Calculator : None Response Time : N.A Think Time : N.A Minimum Instruction Time : 0

Correct Marks : 4 Wrong Marks : 1

शब्द श्रृंखला को पूर्ण करें:

ELFT, GLHT, MLNT

- (1) OLPT
- (2) LLMT
- (3) KLMT
- (4) KLLT

Options :

92090637157. 1
92090637158. 2

92090637159. 3

92090637160. 4

Question Number : 91 Question Id : 9209069406 Question Type : MCQ Option Shuffling : No Is Question Mandatory : No Calculator : None Response Time : N.A Think Time : N.A Minimum Instruction Time : 0

Correct Marks : 4 Wrong Marks : 1

Which of the given conclusions logical by follows the given two statements

Statements:

All pens are newspaper Some newspaper are car No car is tree.

Conclusions:

- I) Some pens are tree
- (II) Some Newspaper are tree.

Choose the correct answer from the options given below :

- (1) Only conclusion I follow
- (2) Only conclusion II follow
- (3) Either I or II follow
- (4) Neither I nor II follow

Options :

92090637161. 1

92090637162. 2

92090637163. 3

92090637164. 4

Question Number : 91 Question Id : 9209069406 Question Type : MCQ Option Shuffling : No Is Question Mandatory : No Calculator : None Response Time : N.A Think Time : N.A Minimum Instruction Time : 0

Correct Marks : 4 Wrong Marks : 1

नीचे दिए गए निष्कर्षों में से कौन सा तार्किक रूप से दर्शाए गए दो कथनों का अनुसरण करता है

सभी पेन समाचार पत्र हैं।

कुछ समाचार पत्र कार हैं।

कोई कार वृक्ष नहीं हैं।

निष्कर्ष

I. कुछ पेन वृक्ष हैं।

II. कुछ समाचार पत्र वृक्ष हैं।

नीचे दिए गए विकल्पों में से सबसे उपयुक्त उत्तर का चयन कीजिए

- (1) केवल निष्कर्ष I - अनुसरण
- (2) केवल निष्कर्ष II - अनुसरण
- (3) I अथवा II कोई भी अनुसरण
- (4) न तो II नहीं I अनुसरण

Options :

92090637161. 1

92090637162. 2

92090637163. 3

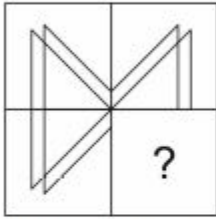
92090637164. 4

**Question Number : 92 Question Id : 9209069407 Question Type : MCQ Option Shuffling : No Is
Question Mandatory : No Calculator : None Response Time : N.A Think Time : N.A Minimum
Instruction Time : 0**

Correct Marks : 4 Wrong Marks : 1

Select a figure from the given four alternatives, which when placed in the blank space of problem figure would complete the pattern

Problem figure:



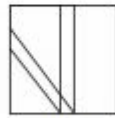
Answer figures



(a)



(b)



(c)



(d)

(1) (a)

(2) (b)

(3) (c)

(4) (d)

Options :

92090637165. 1

92090637166. 2

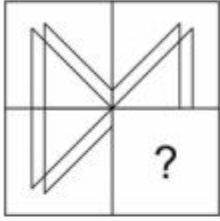
92090637167. 3

92090637168. 4

Question Number : 92 Question Id : 9209069407 Question Type : MCQ Option Shuffling : No Is Question Mandatory : No Calculator : None Response Time : N.A Think Time : N.A Minimum Instruction Time : 0

Correct Marks : 4 Wrong Marks : 1

दिए गए विकल्पों में से एक आरेख चयन करें, जिसे कि जब जटिल आरेख के रिक्त स्थान पर रखें एक प्रतिरूप पूर्ण करें -



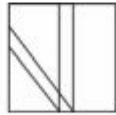
उत्तर आरेख



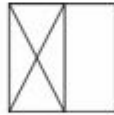
(a)



(b)



(c)



(d)

(1) (a)

(2) (b)

(3) (c)

(4) (d)

Options :

92090637165. 1

92090637166. 2

92090637167. 3

92090637168. 4

Question Number : 93 Question Id : 9209069408 Question Type : MCQ Option Shuffling : No Is Question Mandatory : No Calculator : None Response Time : N.A Think Time : N.A Minimum Instruction Time : 0

Correct Marks : 4 Wrong Marks : 1

Choose the group of words that shows the same relationship as given in the question
clay: potter : pots

(1) Doctor : injection : pills.

(2) cloth: tailor: clothes

(3) Black-board: chalk teacher

(4) Electricity: Bulb: light.

Options :

92090637169. 1

92090637170. 2

92090637171. 3

92090637172. 4

Question Number : 93 Question Id : 9209069408 Question Type : MCQ Option Shuffling : No Is Question Mandatory : No Calculator : None Response Time : N.A Think Time : N.A Minimum Instruction Time : 0

Correct Marks : 4 Wrong Marks : 1

शब्द समूह को चुनें जो प्रश्न में दिया गया रिश्ता दर्शाता है -

मिट्टी : चाक : बर्तन

- | | |
|--------------------------------|---------------------------------|
| (1) डॉक्टर - इंजेक्शन - गोली | (2) कपड़ा - दर्जी - कपड़े |
| (3) ब्लैक बोर्ड - चॉक - शिक्षक | (4) इलेक्ट्रिसिटी - बल्ब - लाईट |

Options :

92090637169. 1
92090637170. 2
92090637171. 3
92090637172. 4

Question Number : 94 Question Id : 9209069409 Question Type : MCQ Option Shuffling : No Is Question Mandatory : No Calculator : None Response Time : N.A Think Time : N.A Minimum Instruction Time : 0

Correct Marks : 4 Wrong Marks : 1

A lady said, 'this person is my grandfather's only son's daughter'. How is the lady related to the person:

- (1) Mother
(2) Aunt
(3) Cousin
(4) Sister

Options :

92090637173. 1
92090637174. 2
92090637175. 3
92090637176. 4

Question Number : 94 Question Id : 9209069409 Question Type : MCQ Option Shuffling : No Is Question Mandatory : No Calculator : None Response Time : N.A Think Time : N.A Minimum Instruction Time : 0

Correct Marks : 4 Wrong Marks : 1

एक महिला ने कहा यह व्यक्ति दादा जी के एकमात्र पुत्र की पुत्री है। उस महिला का उस पुरुष के साथ क्या रिश्ता है?

- | | |
|----------|----------|
| (1) माता | (2) आंटी |
| (3) कज़न | (4) बहन |

Options :

92090637173. 1
92090637174. 2
92090637175. 3
92090637176. 4

Question Number : 95 Question Id : 9209069410 Question Type : MCQ Option Shuffling : No Is Question Mandatory : No Calculator : None Response Time : N.A Think Time : N.A Minimum Instruction Time : 0

Correct Marks : 4 Wrong Marks : 1

Statement: drastic increase in pollution is now a global phenomenon.

Assumptions

- (I) Growing population, industries highways and constructions are beyond control
- (II) All countries have realized it and working towards the control.

- (1) If only I is implicit
- (2) If only II is implicit
- (3) If neither I nor II is implicit
- (4) If both I and II an implicit

Options :

- 92090637177. 1
- 92090637178. 2
- 92090637179. 3
- 92090637180. 4

Question Number : 95 Question Id : 9209069410 Question Type : MCQ Option Shuffling : No Is Question Mandatory : No Calculator : None Response Time : N.A Think Time : N.A Minimum Instruction Time : 0

Correct Marks : 4 Wrong Marks : 1

कथन: प्रदूषण में प्रचंड वृद्धि अब एक वैश्विक दृश्य है

पूर्वानुमान

- (I) बढ़ती जनसंख्या उद्योग-धंधे, हाईवे और भवन निर्माण नियंत्रण से बाहर है।
 - (II) सभी देशों ने इसे महसूस किया और इसके नियंत्रण पर कार्यरत हैं।
- (1) केवल I अस्पष्ट है।
 - (2) केवल II अस्पष्ट है।
 - (3) न तो I नहीं II अस्पष्ट है।
 - (4) दोनों I और II अस्पष्ट है।

Options :

- 92090637177. 1
- 92090637178. 2
- 92090637179. 3
- 92090637180. 4

Question Number : 96 Question Id : 9209069411 Question Type : MCQ Option Shuffling : No Is Question Mandatory : No Calculator : None Response Time : N.A Think Time : N.A Minimum

Instruction Time : 0

Correct Marks : 4 Wrong Marks : 1

Going 100m to the north of her house, Charu turns left and goes another 40m. Then turning to the south she goes 50m and then starts walking to her house. In which direction is she working now?

- (1) North
- (2) West
- (3) South-West
- (4) South-East

Options :

- 92090637181. 1
- 92090637182. 2
- 92090637183. 3
- 92090637184. 4

Question Number : 96 Question Id : 9209069411 Question Type : MCQ Option Shuffling : No Is Question Mandatory : No Calculator : None Response Time : N.A Think Time : N.A Minimum Instruction Time : 0

Correct Marks : 4 Wrong Marks : 1

चारू अपने घर से 100 मीटर उत्तर की ओर जाकर बाईं ओर घूम जाती है और 40 मीटर चलती है, फिर दक्षिण की ओर मुड़ जाती है, 50 मीटर चलती है, उसके बाद अपने घर की ओर टहलने लगती है। अब वह किस दिशा में रहती है?

- | | |
|-------------------|------------------|
| (1) उत्तर | (2) पश्चिम |
| (3) दक्षिण-पश्चिम | (4) दक्षिण पूर्व |

Options :

- 92090637181. 1
- 92090637182. 2
- 92090637183. 3
- 92090637184. 4

Question Number : 97 Question Id : 9209069412 Question Type : MCQ Option Shuffling : No Is Question Mandatory : No Calculator : None Response Time : N.A Think Time : N.A Minimum Instruction Time : 0

Correct Marks : 4 Wrong Marks : 1

In the below mentioned question, two statements and two conclusions I and II are given. Choose one of the following answer that you think is correct given after the statement and conclusion.

Statement- All gardens are schools. All schools are colleges.

Conclusions- I – All gardens are colleges

II- Some gardens are not colleges

Option

- (1) only conclusion I follows
- (2) only conclusion II follows
- (3) both I and II follows
- (4) neither I nor II follows

Options :

92090637185. 1
92090637186. 2
92090637187. 3
92090637188. 4

Question Number : 97 Question Id : 9209069412 Question Type : MCQ Option Shuffling : No Is Question Mandatory : No Calculator : None Response Time : N.A Think Time : N.A Minimum Instruction Time : 0

Correct Marks : 4 Wrong Marks : 1

निम्नांकित प्रश्न में दो कथन और दो निष्कर्ष I और II दिए गए हैं। निम्नलिखित में से एक उत्तर का चयन करें जो कि आपके विचार से दिए गए कथन और निष्कर्ष के लिए सही उत्तर है।

कथन I : सभी बगीचे स्कूल हैं।
II : सभी स्कूल कॉलेज हैं।

निष्कर्ष I : सभी बगीचे कॉलेज हैं।
II : कुछ बगीचे कॉलेज नहीं हैं।

विकल्प

- (1) केवल निष्कर्ष I का अनुपालन करता है।
- (2) केवल निष्कर्ष II का अनुपालन करता है।
- (3) दोनों I और II का अनुपालन करता है।
- (4) न तो I नहीं II का अनुपालन करता है।

Options :

92090637185. 1
92090637186. 2
92090637187. 3
92090637188. 4

Question Number : 98 Question Id : 9209069413 Question Type : MCQ Option Shuffling : No Is Question Mandatory : No Calculator : None Response Time : N.A Think Time : N.A Minimum Instruction Time : 0

Correct Marks : 4 Wrong Marks : 1

Ram, Sham Pinki, Naresh, Mita Mahesh are sitting in a row facing north. Pinki is the neighbor of sham and Laxmi, Naresh is 4th to the right of Mahesh. Mita is the immediate right of Naresh. Who are the left of Pinki?

- (1) Laxmi, Naresh, Mita and Ram
- (2) Mahesh and Sham
- (3) Mahesh, Sham and laxmi
- (4) Sham and Mita

Options :

92090637189. 1

92090637190. 2

92090637191. 3

92090637192. 4

Question Number : 98 Question Id : 9209069413 Question Type : MCQ Option Shuffling : No Is Question Mandatory : No Calculator : None Response Time : N.A Think Time : N.A Minimum Instruction Time : 0

Correct Marks : 4 Wrong Marks : 1

राम, शाम, पंकी, लक्ष्मी, नरेश, मीता और महेश उत्तरमुखी होकर बैठे हैं। पंकी, शाम और लक्ष्मी की पड़ोसन है। नरेश महेश के दाएं चौथा है। मीता, नरेश के बिल्कुल दाईं ओर हैं।

पंकी के बाईं ओर कौन है:

- | | |
|--------------------------------|-----------------|
| (1) लक्ष्मी, नरेश, मीता और राम | (2) महेश और शाम |
| (3) महेश, शाम और लक्ष्मी | (4) शाम और मीता |

Options :

92090637189. 1

92090637190. 2

92090637191. 3

92090637192. 4

Question Number : 99 Question Id : 9209069414 Question Type : MCQ Option Shuffling : No Is Question Mandatory : No Calculator : None Response Time : N.A Think Time : N.A Minimum Instruction Time : 0

Correct Marks : 4 Wrong Marks : 1

Ram, Sham Pinki, Naresh, Mita Mahesh are sitting in a row facing north. Pinki is the neighbor of sham and Laxmi, Naresh is 4th to the right of Mahesh. Mita is the immediate right of Naresh. Who are the left of Pinki?

- (1) Laxmi, Naresh, Mita and Ram
- (2) Mahesh and Sham
- (3) Mahesh, Sham and laxmi
- (4) Sham and Mita

Options :

92090637193. 1
92090637194. 2
92090637195. 3
92090637196. 4

Question Number : 99 Question Id : 9209069414 Question Type : MCQ Option Shuffling : No Is Question Mandatory : No Calculator : None Response Time : N.A Think Time : N.A Minimum Instruction Time : 0

Correct Marks : 4 Wrong Marks : 1

आठ मित्र A, B, C, D, E, F, G और H केन्द्र के अभिमुख गोलाकार में बैठे हैं। B, G और D के मध्य बैठा है। H B के बाईं ओर तृतीय तथा A के दांयी ओर द्वितीय है। C, A और G के मध्य में B और E एक दूसरे के आमने सामने बैठे हैं। D के बाईं ओर तीसरे कौन हैं?

- (1) F
- (2) E
- (3) A
- (4) B

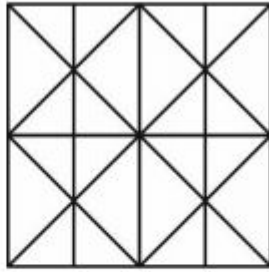
Options :

92090637193. 1
92090637194. 2
92090637195. 3
92090637196. 4

Question Number : 100 Question Id : 9209069415 Question Type : MCQ Option Shuffling : No Is Question Mandatory : No Calculator : None Response Time : N.A Think Time : N.A Minimum Instruction Time : 0

Correct Marks : 4 Wrong Marks : 1

Find the minimum number of straight lines required to make the given figure



- (1) 11
(3) 16

- (2) 14
(4) 17

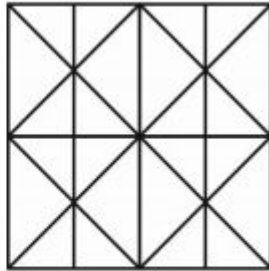
Options :

92090637197. 1
92090637198. 2
92090637199. 3
92090637200. 4

Question Number : 100 Question Id : 9209069415 Question Type : MCQ Option Shuffling : No Is Question Mandatory : No Calculator : None Response Time : N.A Think Time : N.A Minimum Instruction Time : 0

Correct Marks : 4 Wrong Marks : 1

दी गई आकृति बनाने में न्यूनतम कितनी सीधी रेखाओं की आवश्यकता होगी ?



- (1) 11
(3) 16

- (2) 14
(4) 17

Options :

92090637197. 1
92090637198. 2
92090637199. 3
92090637200. 4