

National Testing Agency

Question Paper Name :	B PLANNING AND B ARCH 28th Jan 2023 Shift 2
Subject Name :	B PLANNING AND B ARCH
Creation Date :	2023-01-28 23:48:20
Duration :	210
Total Marks :	500
Display Marks:	Yes

B PLANNING AND B ARCH

Group Number :	1
Group Id :	71550530
Group Maximum Duration :	0
Group Minimum Duration :	210
Show Attended Group? :	No
Edit Attended Group? :	No
Break time :	0
Group Marks :	500
Is this Group for Examiner? :	No
Examiner permission :	Cant View
Show Progress Bar? :	No

Mathematics Section A

Section Id :	715505163
Section Number :	1

Section type :	Online
Mandatory or Optional :	Mandatory
Number of Questions :	20
Number of Questions to be attempted :	20
Section Marks :	80
Enable Mark as Answered Mark for Review and Clear Response :	Yes
Maximum Instruction Time :	0
Sub-Section Number :	1
Sub-Section Id :	715505163
Question Shuffling Allowed :	Yes
Is Section Default? :	null

Question Number : 1 Question Id : 7155052651 Question Type : MCQ Option Shuffling : Yes Is Question Mandatory : No Calculator : None Response Time : N.A Think Time : N.A Minimum Instruction Time : 0

Correct Marks : 4 Wrong Marks : 1

Let R_1 and R_2 be two relations on \mathbb{R}^2 defined as

(a, b) R_1 (c, d) if $ad - bc \geq 0$

(a, b) R_2 (c, d) if $a + d \geq b + c$. Then :

Options :

7155058371. R_1 is transitive but R_2 is not transitive

7155058372. R_2 is transitive but R_1 is not transitive

7155058373. Both R_1 and R_2 are transitive

7155058374. Neither R_1 nor R_2 is transitive

Question Number : 1 Question Id : 7155052651 Question Type : MCQ Option Shuffling : Yes Is Question Mandatory : No Calculator : None Response Time : N.A Think Time : N.A Minimum Instruction Time : 0

Correct Marks : 4 Wrong Marks : 1

ધારો કે R_1 અને R_2 એ \mathbb{R}^2 પર વ્યાખ્યાયિત બે સંબંધો છે જેથી તો :

(a, b) R_1 (c, d) જો $ad - bc \geq 0$

(a, b) R_2 (c, d) જો $a + d \geq b + c$

Options :

7155058371. R_1 પરંપરિત છે પરંતુ R_2 પરંપરિત નથી.

7155058372. R_2 પરંપરિત છે પરંતુ R_1 પરંપરિત નથી.

7155058373. R_1 અને R_2 બંને પરંપરિત છે.

7155058374. R_1 કે R_2 કોઈપણ પરંપરિત નથી.

Question Number : 2 Question Id : 7155052652 Question Type : MCQ Option Shuffling : Yes Is Question Mandatory : No Calculator : None Response Time : N.A Think Time : N.A Minimum Instruction Time : 0

Correct Marks : 4 Wrong Marks : 1

Let α and β be the roots of $x^2 - 3x + 9 = 0$. Then $\left(\frac{\beta^{30}}{(9\alpha)^{10}} + \frac{\alpha^{30}}{(9\beta)^{10}} \right)^2$ is equal to

Options :

7155058375. 1

7155058376. $\frac{1}{9}$

7155058377. 3

7155058378. 9

Question Number : 2 Question Id : 7155052652 Question Type : MCQ Option Shuffling : Yes Is Question Mandatory : No Calculator : None Response Time : N.A Think Time : N.A Minimum Instruction Time : 0

Correct Marks : 4 Wrong Marks : 1

ધારો કે α અને β એ બહુપદી $x^2 - 3x + 9 = 0$. નાં બે બીજા છે. તો $\left(\frac{\beta^{30}}{(9\alpha)^{10}} + \frac{\alpha^{30}}{(9\beta)^{10}} \right)^2 = \underline{\hspace{2cm}}$.

Options :

7155058375. 1

7155058376. $\frac{1}{9}$

7155058377. 3

7155058378. 9

Question Number : 3 Question Id : 7155052653 Question Type : MCQ Option Shuffling : Yes Is Question Mandatory : No Calculator : None Response Time : N.A Think Time : N.A Minimum Instruction Time : 0

Correct Marks : 4 Wrong Marks : 1

For $z = 2 + 5i$, the modulus of $2z^3 + 21z^2 - 58z + 4$ is :

Options :

7155058379. 1153

7155058380. 947

7155058381. 537

7155058382. 837

Question Number : 3 Question Id : 7155052653 Question Type : MCQ Option Shuffling : Yes Is Question Mandatory : No Calculator : None Response Time : N.A Think Time : N.A Minimum Instruction Time : 0

Correct Marks : 4 Wrong Marks : 1

$z = 2 + 5i$ માટે, $2z^3 + 21z^2 - 58z + 4$ નો મૂલ્ય _____ છે.

Options :

7155058379. 1153

7155058380. 947

7155058381. 537

7155058382. 837

Question Number : 4 Question Id : 7155052654 Question Type : MCQ Option Shuffling : Yes Is Question Mandatory : No Calculator : None Response Time : N.A Think Time : N.A Minimum Instruction Time : 0

Correct Marks : 4 Wrong Marks : 1

If the system of equations

$$Kx - \sqrt{2}y + \sqrt{5}z = \sqrt{7}$$

$$\sqrt{5}x + \sqrt{3}y - \sqrt{2}z = \sqrt{11}$$

$$30x + (3\sqrt{15} - 5\sqrt{6})y + (5\sqrt{15} - 3\sqrt{10})z = 5\sqrt{21} + 3\sqrt{55}$$

has infinitely many solutions, then K^2 is

Options :

7155058383. 27

7155058384. $\frac{1}{3}$

7155058385. 9

7155058386. 3

Question Number : 4 Question Id : 7155052654 Question Type : MCQ Option Shuffling : Yes Is Question Mandatory : No Calculator : None Response Time : N.A Think Time : N.A Minimum Instruction Time : 0

Correct Marks : 4 Wrong Marks : 1

જો સમીકરણ સંહિતિ

$$Kx - \sqrt{2}y + \sqrt{5}z = \sqrt{7}$$

$$\sqrt{5}x + \sqrt{3}y - \sqrt{2}z = \sqrt{11}$$

$$30x + (3\sqrt{15} - 5\sqrt{6})y + (5\sqrt{15} - 3\sqrt{10})z = 5\sqrt{21} + 3\sqrt{55}$$

ને અસંખ્યા ઉકેલો હોય, તો $k^2 =$ _____.

Options :

7155058383. 27

7155058384. $\frac{1}{3}$

7155058385. 9

7155058386. 3

Question Number : 5 Question Id : 7155052655 Question Type : MCQ Option Shuffling : Yes Is Question Mandatory : No Calculator : None Response Time : N.A Think Time : N.A Minimum

Instruction Time : 0

Correct Marks : 4 Wrong Marks : 1

For $\alpha, \beta \in \mathbb{R}$, if the matrices $A = \begin{pmatrix} \alpha & 0 \\ 0 & \beta \end{pmatrix}$, $B = \begin{pmatrix} \alpha & 0 \\ 0 & \alpha \end{pmatrix}$ and $I = \begin{pmatrix} 1 & 0 \\ 0 & 1 \end{pmatrix}$ satisfy the equation

$(A*B)*2I = 20I$, where $*$ is defined as $A*B = A^2 + B^2$, then $|\alpha\beta|$ is equal to :

Options :

7155058387. $2\sqrt{3}$

7155058388. $2\sqrt{2}$

7155058389. 4

7155058390. 2

Question Number : 5 Question Id : 7155052655 Question Type : MCQ Option Shuffling : Yes Is

Question Mandatory : No Calculator : None Response Time : N.A Think Time : N.A Minimum

Instruction Time : 0

Correct Marks : 4 Wrong Marks : 1

$\alpha, \beta \in \mathbb{R}$ માટે, જો શ્રેણિકો $A = \begin{pmatrix} \alpha & 0 \\ 0 & \beta \end{pmatrix}$, $B = \begin{pmatrix} \alpha & 0 \\ 0 & \alpha \end{pmatrix}$ અને $I = \begin{pmatrix} 1 & 0 \\ 0 & 1 \end{pmatrix}$ એ સમીકરણ $(A*B)*2I = 20I$ નું સમાધાન કરે, જ્યાં $*$ એ $A*B = A^2 + B^2$ વડે વ્યાખ્યાયિત હોય, તો $|\alpha\beta|$ _____.

Options :

7155058387. $2\sqrt{3}$

7155058388. $2\sqrt{2}$

7155058389. 4

7155058390. 2

Question Number : 6 Question Id : 7155052656 Question Type : MCQ Option Shuffling : Yes Is

Question Mandatory : No Calculator : None Response Time : N.A Think Time : N.A Minimum

Instruction Time : 0

Correct Marks : 4 Wrong Marks : 1

The sum of the first eleven terms of the series is $\frac{1}{1+1^2+1^4} + \frac{2}{1+2^2+2^4} + \frac{3}{1+3^2+3^4} + \dots$

Options :

7155058391. $\frac{61}{133}$

7155058392. $\frac{66}{133}$

7155058393. $\frac{16}{33}$

7155058394. $\frac{33}{67}$

Question Number : 6 Question Id : 7155052656 Question Type : MCQ Option Shuffling : Yes Is

Question Mandatory : No Calculator : None Response Time : N.A Think Time : N.A Minimum

Instruction Time : 0

Correct Marks : 4 Wrong Marks : 1

શ્રેણી $\frac{1}{1+1^2+1^4} + \frac{2}{1+2^2+2^4} + \frac{3}{1+3^2+3^4} + \dots$ નાં પ્રથમ અઘ્યાર પદોનો સરવાળો _____ છે.

Options :

7155058391. $\frac{61}{133}$

7155058392. $\frac{66}{133}$

7155058393. $\frac{16}{33}$

Question Number : 7 Question Id : 7155052657 Question Type : MCQ Option Shuffling : Yes Is Question Mandatory : No Calculator : None Response Time : N.A Think Time : N.A Minimum Instruction Time : 0

Correct Marks : 4 Wrong Marks : 1

$\lim_{x \rightarrow 0} (1 + 3x)^{\frac{x+2}{x}}$ is equal to

Options :

7155058395. e

7155058396. e^3

7155058397. e^6

7155058398. e^9

Question Number : 7 Question Id : 7155052657 Question Type : MCQ Option Shuffling : Yes Is Question Mandatory : No Calculator : None Response Time : N.A Think Time : N.A Minimum Instruction Time : 0

Correct Marks : 4 Wrong Marks : 1

$\lim_{x \rightarrow 0} (1 + 3x)^{\frac{x+2}{x}}$

Options :

7155058395. e

7155058396. e^3

7155058397. e^6

7155058398. e⁹

Question Number : 8 Question Id : 7155052658 Question Type : MCQ Option Shuffling : Yes Is Question Mandatory : No Calculator : None Response Time : N.A Think Time : N.A Minimum Instruction Time : 0

Correct Marks : 4 Wrong Marks : 1

Let $P(\alpha, \beta, \lambda)$ be the image of the point $Q(1, 2, 0)$ in the line $\frac{x-5}{3} = \frac{y-12}{1} = \frac{z-10}{2}$, then $(PQ)^2$ is equal to

Options :

7155058399. 90

7155058400. 180

7155058401. 360

7155058402. 270

Question Number : 8 Question Id : 7155052658 Question Type : MCQ Option Shuffling : Yes Is Question Mandatory : No Calculator : None Response Time : N.A Think Time : N.A Minimum Instruction Time : 0

Correct Marks : 4 Wrong Marks : 1

ધારો કે $P(\alpha, \beta, \lambda)$ એ બિંદુ $Q(1, 2, 0)$ નું ચિત્ર $\frac{x-5}{3} = \frac{y-12}{1} = \frac{z-10}{2}$ પરનું પ્રતિબિંબ છે. તો $(PQ)^2 =$ _____ .

Options :

7155058399. 90

7155058400. 180

7155058401. 360

7155058402. 270

Question Number : 9 Question Id : 7155052659 Question Type : MCQ Option Shuffling : Yes Is Question Mandatory : No Calculator : None Response Time : N.A Think Time : N.A Minimum Instruction Time : 0

Correct Marks : 4 Wrong Marks : 1

A box contains 7 red and 9 white balls. The number of ways of drawing 8 balls such that there are at least three balls of each colour, is :

Options :

7155058403. 8820

7155058404. 10584

7155058405. 1764

7155058406. 3515

Question Number : 9 Question Id : 7155052659 Question Type : MCQ Option Shuffling : Yes Is Question Mandatory : No Calculator : None Response Time : N.A Think Time : N.A Minimum Instruction Time : 0

Correct Marks : 4 Wrong Marks : 1

એક પેટીમાં 7 લાલ અને 9 સફેદ દડાઓ છે. 8 કાઢવામાં આવે ત્યારે ઓછામાં ઓછા ત્રણ દડા પ્રત્યેક રંગના હોય તેવી રીતો ની સંખ્યા _____ છે.

Options :

7155058403. 8820

7155058404. 10584

7155058405. 1764

7155058406. 3515

Question Number : 10 Question Id : 7155052660 Question Type : MCQ Option Shuffling : Yes Is Question Mandatory : No Calculator : None Response Time : N.A Think Time : N.A Minimum Instruction Time : 0

Correct Marks : 4 Wrong Marks : 1

Let $[t]$ denote the greatest integer function. If $\int_0^1 [1+x^2+x^4] dx = a$, then $36a - 25a^2 + 8a^3 - a^4$ is equal to

Options :

7155058407. 19

7155058408. -19

7155058409. 18

7155058410. -21

Question Number : 10 Question Id : 7155052660 Question Type : MCQ Option Shuffling : Yes Is Question Mandatory : No Calculator : None Response Time : N.A Think Time : N.A Minimum Instruction Time : 0

Correct Marks : 4 Wrong Marks : 1

ધારો કે $[t]$ એ મહત્તમ પૂર્ણાંક વિધેય દર્શાવે છે. જો $\int_0^1 [1+x^2+x^4] dx = a$, હોય, તો $36a - 25a^2 + 8a^3 - a^4$

Options :

7155058407. 19

7155058408. -19

7155058409. 18

7155058410. -21

Question Number : 11 Question Id : 7155052661 Question Type : MCQ Option Shuffling : Yes Is Question Mandatory : No Calculator : None Response Time : N.A Think Time : N.A Minimum Instruction Time : 0

Correct Marks : 4 Wrong Marks : 1

Let $PL = 8$ units and $QM = 2$ units be two parallel line segments such that the line segments PM and QL intersect at the point R . If PL and QM are tangents to a circle passing through points P, Q, R then radius of this circle is

Options :

7155058411. $\sqrt{2}$

7155058412. 2

7155058413. $2\sqrt{2}$

7155058414. 4

Question Number : 11 Question Id : 7155052661 Question Type : MCQ Option Shuffling : Yes Is Question Mandatory : No Calculator : None Response Time : N.A Think Time : N.A Minimum Instruction Time : 0

Correct Marks : 4 Wrong Marks : 1

ધારોકે $PL = 8$ એકમ અને $QM = 2$ એકમ એ બે એવા સમાંતર રેખા ખંડો છે, કે જેથી રેખા ખંડો PM અને QL એ બિંદુ R પર છેદે છે. જો PL અને QM , એ બિંદુઓ P, Q, R માંથી પસાર થતા વર્તુળ નાં સ્પર્શકો હોય ; તો આ વર્તુળની ત્રિજ્યા _____ છે.

Options :

7155058411. $\sqrt{2}$

7155058412. 2

7155058413. $2\sqrt{2}$

7155058414. 4

Question Number : 12 Question Id : 7155052662 Question Type : MCQ Option Shuffling : Yes Is

Question Mandatory : No Calculator : None Response Time : N.A Think Time : N.A Minimum

Instruction Time : 0

Correct Marks : 4 Wrong Marks : 1

For some $a \in \mathbb{N}$, let PQR be a triangle with two fixed vertices P(2, 5) and Q(a, -11). If the point R moves on the line $l_1: 9x + 7y + a = 0$, then the centroid of ΔPQR moves on the line l_2 , which is parallel to l_1 at a distance $\frac{20}{3\sqrt{130}}$ units from it. If the distance of Q from l_2 is $\frac{k}{3\sqrt{130}}$, then k is equal to :

Options :

7155058415. 117

7155058416. 129

7155058417. 131

7155058418. 133

Question Number : 12 Question Id : 7155052662 Question Type : MCQ Option Shuffling : Yes Is

Question Mandatory : No Calculator : None Response Time : N.A Think Time : N.A Minimum

Instruction Time : 0

Correct Marks : 4 Wrong Marks : 1

કોઈક $a \in \mathbb{N}$, માટે, ધારો કે PQR એ બે નિશ્ચિત શિરોબિંદુઓ P(2, 5) અને Q(a, -11) વાળો એક ત્રિકોણ છે. જો બિંદુ R એ રેખા $l_1: 9x + 7y + a = 0$ પર ખસે, તો ΔPQR નું મધ્યકેન્દ્ર એ l_1 થી $\frac{20}{3\sqrt{130}}$ એકમ અંતરે સમાંતર હોય તેવી રેખા l_2 પર ખસે છે. જો l_2 થી બિંદુ Q નું અંતર $\frac{k}{3\sqrt{130}}$ હોય, તો k નું મૂલ્ય _____ છે.

Options :

7155058415. 117

7155058416. 129

7155058417. 131

7155058418. 133

Question Number : 13 Question Id : 7155052663 Question Type : MCQ Option Shuffling : Yes Is

Question Mandatory : No Calculator : None Response Time : N.A Think Time : N.A Minimum

Instruction Time : 0

Correct Marks : 4 Wrong Marks : 1

Let $A_i(x_i, y_i)$, $i = 1, 2, 3$ be points on the circle $x^2 + y^2 = 10$ such that A_1 lies in the 1st quadrant and it is the image of point A_2 with respect to y -axis. If the distance of point A_1 from each of the points A_2 and A_3 is 2, then twenty times the area of the $\Delta A_1 A_2 A_3$ is

Options :

7155058419. 12

7155058420. 30

7155058421. 24

7155058422. 48

Question Number : 13 Question Id : 7155052663 Question Type : MCQ Option Shuffling : Yes Is

Question Mandatory : No Calculator : None Response Time : N.A Think Time : N.A Minimum

Instruction Time : 0

Correct Marks : 4 Wrong Marks : 1

ધારો કે $A_i(x_i, y_i)$, $i=1,2,3$ એ વર્તુળ $x^2+y^2=10$ પરના એવા બિંદુઓ છે કે જેથી A_1 પ્રથમ ચરણમાં આવેલ છે અને તે, બિંદુ A_2 નું y -અક્ષને સાપેક્ષ પ્રતિબિંબ છે. જો બિંદુઓ A_2 અને A_3 પૈકીના દરેક થી બિંદુ A_1 નું અંતર 2 હોય, તો $\Delta A_1A_2A_3$ નાં ક્ષેત્રફળ નું 20 ઘણું _____ થશે.

Options :

7155058419. 12

7155058420. 30

7155058421. 24

7155058422. 48

Question Number : 14 Question Id : 7155052664 Question Type : MCQ Option Shuffling : Yes Is

Question Mandatory : No Calculator : None Response Time : N.A Think Time : N.A Minimum

Instruction Time : 0

Correct Marks : 4 Wrong Marks : 1

The remainder when 7^{89} is divided by 15 is

Options :

7155058423. 5

7155058424. 7

7155058425. 9

7155058426. 11

Question Number : 14 Question Id : 7155052664 Question Type : MCQ Option Shuffling : Yes Is

Question Mandatory : No Calculator : None Response Time : N.A Think Time : N.A Minimum

Instruction Time : 0

Correct Marks : 4 Wrong Marks : 1

7⁸⁹ ને 15 વડે ભાગતાં મળતી શેષ _____ છે .

Options :

7155058423. 5

7155058424. 7

7155058425. 9

7155058426. 11

Question Number : 15 Question Id : 7155052665 Question Type : MCQ Option Shuffling : Yes Is Question Mandatory : No Calculator : None Response Time : N.A Think Time : N.A Minimum Instruction Time : 0

Correct Marks : 4 Wrong Marks : 1

If the plane $y = \alpha x - \beta z + \gamma$ passing through the point $(1, -1, 3)$ is perpendicular to each of the planes $2x + y + z = 1$ and $3x - 2y + 2z = 0$, then $\alpha + \beta + \gamma$ is equal to :

Options :

7155058427. 5

7155058428. 13

7155058429. 19

7155058430. 27

Question Number : 15 Question Id : 7155052665 Question Type : MCQ Option Shuffling : Yes Is Question Mandatory : No Calculator : None Response Time : N.A Think Time : N.A Minimum Instruction Time : 0

Correct Marks : 4 Wrong Marks : 1

જો બિંદુ(1, -1, 3) માંથી પસાર થતું સમતલ $y = \alpha x - \beta y + \gamma z$ એ, સમતલો $2x + y + z = 1$ અને $3x - 2y + 2z = 0$ બંને ને લંબ હોય, તો $\alpha + \beta + \gamma =$ _____.

Options :

7155058427. 5

7155058428. 13

7155058429. 19

7155058430. 27

Question Number : 16 Question Id : 7155052666 Question Type : MCQ Option Shuffling : Yes Is Question Mandatory : No Calculator : None Response Time : N.A Think Time : N.A Minimum Instruction Time : 0

Correct Marks : 4 Wrong Marks : 1

Let $\vec{a} = \hat{i} + 2\hat{j} + 3\hat{k}$, $\vec{b} = \hat{i} - \hat{j} + 2\hat{k}$, $\vec{c} = 2\hat{i} + \hat{j} - 4\hat{k}$ be three vectors. If \vec{r} is the vector such that $\vec{r} \times \vec{a} = (\vec{b} + \vec{c}) \times \vec{a}$ and $\vec{r} \cdot (\vec{b} - \vec{c}) = 0$, then $\vec{r} \cdot (\hat{i} + \hat{j} - \hat{k})$ is equal to :

Options :

7155058431. 3

7155058432. 4

7155058433. 5

7155058434. 6

Question Number : 16 Question Id : 7155052666 Question Type : MCQ Option Shuffling : Yes Is Question Mandatory : No Calculator : None Response Time : N.A Think Time : N.A Minimum Instruction Time : 0

Correct Marks : 4 Wrong Marks : 1

ધારો કે $\vec{a} = \hat{i} + 2\hat{j} + 3\hat{k}$, $\vec{b} = \hat{i} - \hat{j} + 2\hat{k}$, $\vec{c} = 2\hat{i} + \hat{j} - 4\hat{k}$ એ ત્રણ સદિશો છે. જો \vec{r} એ એવો સદિશ હોય કે જેથી $\vec{r} \times \vec{a} = (\vec{b} + \vec{c}) \times \vec{a}$ અને $\vec{r} \cdot (\vec{b} - \vec{c}) = 0$ હોય, તો $\vec{r} \cdot (\hat{i} + \hat{j} - \hat{k}) = \underline{\hspace{2cm}}$.

Options :

7155058431. 3

7155058432. 4

7155058433. 5

7155058434. 6

Question Number : 17 Question Id : 7155052667 Question Type : MCQ Option Shuffling : Yes Is

Question Mandatory : No Calculator : None Response Time : N.A Think Time : N.A Minimum

Instruction Time : 0

Correct Marks : 4 Wrong Marks : 1

The probability that a randomly selected root of the equation $1 + x + x^2 + \dots + x^{118} = 0$ satisfies the equation $x^7 = 1$, is

Options :

7155058435. 0

7155058436. $\frac{1}{59}$

7155058437. $\frac{3}{59}$

7155058438. $\frac{7}{118}$

Question Number : 17 Question Id : 7155052667 Question Type : MCQ Option Shuffling : Yes Is

Question Mandatory : No Calculator : None Response Time : N.A Think Time : N.A Minimum

Instruction Time : 0

Correct Marks : 4 Wrong Marks : 1

સમીકરણ $1 + x + x^2 + \dots + x^{118} = 0$ નું એક યાદચ્છિક રીતે પસંદ કરેલ બીજ, સમીકરણ $x^7 = 1$ નું સમાધાન કરે, તેની સંભાવના _____ છે.

Options :

7155058435. 0

7155058436. $\frac{1}{59}$

7155058437. $\frac{3}{59}$

7155058438. $\frac{7}{118}$

Question Number : 18 Question Id : 7155052668 Question Type : MCQ Option Shuffling : Yes Is

Question Mandatory : No Calculator : None Response Time : N.A Think Time : N.A Minimum

Instruction Time : 0

Correct Marks : 4 Wrong Marks : 1

Let X have the binomial distribution $B(n, p)$. If its mean is 3 and variance is 2, then $P(X < \frac{n}{4})$ is equal to :

Options :

7155058439. $\frac{29 \times 2^8}{3^9}$

7155058440. $\frac{25 \times 2^9}{3^9}$

7155058441. $\frac{163}{3^9}$

$$7155058442. \frac{835}{3^9}$$

Question Number : 18 Question Id : 7155052668 Question Type : MCQ Option Shuffling : Yes Is Question Mandatory : No Calculator : None Response Time : N.A Think Time : N.A Minimum Instruction Time : 0

Correct Marks : 4 Wrong Marks : 1

ધારો કે X નું દ્વિપદી વિતરણ $B(n, p)$ છે. જો તેનું મધ્યક 3 અને વિચરણ 2 હોય, તો $P(X < \frac{n}{4}) =$

_____.

Options :

$$7155058439. \frac{29 \times 2^8}{3^9}$$

$$7155058440. \frac{25 \times 2^9}{3^9}$$

$$7155058441. \frac{163}{3^9}$$

$$7155058442. \frac{835}{3^9}$$

Question Number : 19 Question Id : 7155052669 Question Type : MCQ Option Shuffling : Yes Is Question Mandatory : No Calculator : None Response Time : N.A Think Time : N.A Minimum Instruction Time : 0

Correct Marks : 4 Wrong Marks : 1

The domain of the function $f(x) = \cos^{-1}\left(\frac{x^2 - 3x + 2}{x^2 + 2x - 1}\right)$ is :

Options :

$$7155058443. \left(\sqrt{2} - 1, \frac{3}{5}\right]$$

$$7155058444.$$

$$\left[\frac{3}{5}, \infty\right)$$

$$7155058445. \mathbb{R} - \{-\sqrt{2} - 1, \sqrt{2} - 1\}$$

$$7155058446. (-\infty, -1 - \sqrt{2}) \cup (\sqrt{2} - 1, \infty)$$

Question Number : 19 Question Id : 7155052669 Question Type : MCQ Option Shuffling : Yes Is Question Mandatory : No Calculator : None Response Time : N.A Think Time : N.A Minimum Instruction Time : 0

Correct Marks : 4 Wrong Marks : 1

વિધેય $f(x) = \cos^{-1}\left(\frac{x^2 - 3x + 2}{x^2 + 2x - 1}\right)$ નો પ્રદેશ _____ છે.

Options :

$$7155058443. \left(\sqrt{2} - 1, \frac{3}{5}\right]$$

$$7155058444. \left[\frac{3}{5}, \infty\right)$$

$$7155058445. \mathbb{R} - \{-\sqrt{2} - 1, \sqrt{2} - 1\}$$

$$7155058446. (-\infty, -1 - \sqrt{2}) \cup (\sqrt{2} - 1, \infty)$$

Question Number : 20 Question Id : 7155052670 Question Type : MCQ Option Shuffling : Yes Is Question Mandatory : No Calculator : None Response Time : N.A Think Time : N.A Minimum Instruction Time : 0

Correct Marks : 4 Wrong Marks : 1

Which of the following statements is a tautology ?

Options :

$$7155058447. ((p \Rightarrow q) \vee p) \Rightarrow q$$

7155058448. $((p \wedge q) \Rightarrow p) \Rightarrow q$

7155058449. $((p \wedge q) \wedge (\sim q)) \Rightarrow p$

7155058450. $((p \Rightarrow q) \vee p) \Rightarrow p$

Question Number : 20 Question Id : 7155052670 Question Type : MCQ Option Shuffling : Yes Is

Question Mandatory : No Calculator : None Response Time : N.A Think Time : N.A Minimum

Instruction Time : 0

Correct Marks : 4 Wrong Marks : 1

નીચેના વિધાનો પૈકી કયું નિત્યસત્ય છે ?

Options :

7155058447. $((p \Rightarrow q) \vee p) \Rightarrow q$

7155058448. $((p \wedge q) \Rightarrow p) \Rightarrow q$

7155058449. $((p \wedge q) \wedge (\sim q)) \Rightarrow p$

7155058450. $((p \Rightarrow q) \vee p) \Rightarrow p$

Mathematics Section B

Section Id :	715505164
Section Number :	2
Section type :	Online
Mandatory or Optional :	Mandatory
Number of Questions :	10
Number of Questions to be attempted :	5
Section Marks :	20

Enable Mark as Answered Mark for Review and

Yes

Clear Response :

Maximum Instruction Time :

0

Sub-Section Number :

1

Sub-Section Id :

715505164

Question Shuffling Allowed :

Yes

Is Section Default? :

null

Question Number : 21 Question Id : 7155052671 Question Type : SA Calculator : None

Response Time : N.A Think Time : N.A Minimum Instruction Time : 0

Correct Marks : 4 Wrong Marks : 1

The curve $y = x^2 + 1$ divides the area enclosed by the curves $y + |x| = 3$ and $y = |x-1|$ in the ratio $m : n$, where m and n are coprime, then $m + n$ is equal to _____ .

Response Type : Numeric

Evaluation Required For SA : Yes

Show Word Count : Yes

Answers Type : Range

Text Areas : PlainText

Possible Answers :

10 to 12

Question Number : 21 Question Id : 7155052671 Question Type : SA Calculator : None

Response Time : N.A Think Time : N.A Minimum Instruction Time : 0

Correct Marks : 4 Wrong Marks : 1

વક્ર $y = x^2 + 1$ એ વક્રો $y + |x| = 3$ અને $y = |x-1|$ દ્વારા ઘેરાયેલ ક્ષેત્રનું $m:n$ ના ગુણોત્તરમાં વિભાજન કરે છે, જ્યાં m અને n પરસ્પર અવિભાજ્ય છે. તો $m+n =$ _____ .

Response Type : Numeric

Evaluation Required For SA : Yes

Show Word Count : Yes

Answers Type : Range

Text Areas : PlainText

Possible Answers :

10 to 12

Question Number : 22 Question Id : 7155052672 Question Type : SA Calculator : None

Response Time : N.A Think Time : N.A Minimum Instruction Time : 0

Correct Marks : 4 Wrong Marks : 1

The number of ways in which 30 identical pens can be distributed among 12 students so that each student gets at least one pen and exactly two students get at least two pens each, is _____.

Response Type : Numeric

Evaluation Required For SA : Yes

Show Word Count : Yes

Answers Type : Range

Text Areas : PlainText

Possible Answers :

10 to 12

Question Number : 22 Question Id : 7155052672 Question Type : SA Calculator : None

Response Time : N.A Think Time : N.A Minimum Instruction Time : 0

Correct Marks : 4 Wrong Marks : 1

પ્રત્યેક વિદ્યાર્થીને ઓછામાં ઓછી એક પેન મળે. અને બરાબર બે વિદ્યાર્થીઓ ને ઓછામાં ઓછા બે પેન મળે તે રીતે 30 એકસમાન પેનને 12 વિદ્યાર્થીઓમાં વહેંચી શકાય તેવી રીતોની સંખ્યા _____ છે.

Response Type : Numeric

Evaluation Required For SA : Yes

Show Word Count : Yes

Answers Type : Range

Text Areas : PlainText

Possible Answers :

10 to 12

Question Number : 23 Question Id : 7155052673 Question Type : SA Calculator : None

Response Time : N.A Think Time : N.A Minimum Instruction Time : 0

Correct Marks : 4 Wrong Marks : 1

Let $(1+x^2-x^4)^{12} = \sum_{n=0}^{48} a_n x^n$. Then $a_0 + a_2 + a_4 + \dots + a_{44}$ is equal to

Response Type : Numeric

Evaluation Required For SA : Yes

Show Word Count : Yes

Answers Type : Range

Text Areas : PlainText

Possible Answers :

10 to 12

Question Number : 23 Question Id : 7155052673 Question Type : SA Calculator : None

Response Time : N.A Think Time : N.A Minimum Instruction Time : 0

Correct Marks : 4 Wrong Marks : 1

ધારો કે $(1+x^2-x^4)^{12} = \sum_{n=0}^{48} a_n x^n$. તો $a_0 + a_2 + a_4 + \dots + a_{44} =$ _____.

Response Type : Numeric

Evaluation Required For SA : Yes

Show Word Count : Yes

Answers Type : Range

Text Areas : PlainText

Possible Answers :

10 to 12

Question Number : 24 Question Id : 7155052674 Question Type : SA Calculator : None

Response Time : N.A Think Time : N.A Minimum Instruction Time : 0

Correct Marks : 4 Wrong Marks : 1

If S_n denotes the sum of first n terms of the series $7 + 10 + 16 + 25 + 37 + \dots$, then $S_{30} - S_{20}$ is equal to _____.

Response Type : Numeric

Evaluation Required For SA : Yes

Show Word Count : Yes

Answers Type : Range

Text Areas : PlainText

Possible Answers :

10 to 12

Question Number : 24 **Question Id :** 7155052674 **Question Type :** SA **Calculator :** None

Response Time : N.A **Think Time :** N.A **Minimum Instruction Time :** 0

Correct Marks : 4 **Wrong Marks :** 1

જો S_n એ શ્રેણી $7+10+16+25+37+\dots$ ના પ્રથમ n પદોનો સરવાળો દર્શાવે, તો $S_{30}-S_{20} = \underline{\hspace{2cm}}$.

Response Type : Numeric

Evaluation Required For SA : Yes

Show Word Count : Yes

Answers Type : Range

Text Areas : PlainText

Possible Answers :

10 to 12

Question Number : 25 **Question Id :** 7155052675 **Question Type :** SA **Calculator :** None

Response Time : N.A **Think Time :** N.A **Minimum Instruction Time :** 0

Correct Marks : 4 **Wrong Marks :** 1

If $[t]$ denotes the greatest integer $\leq t$, then the number of points, at which the function

$f(x) = \left[x+x^3 \right] + \left| x-x^3 \right| + \left| x+\frac{1}{2} \right|$ is not differentiable in the open interval $(-10, 10)$, is $\underline{\hspace{2cm}}$.

Response Type : Numeric

Evaluation Required For SA : Yes

Show Word Count : Yes

Answers Type : Range

Text Areas : PlainText

Possible Answers :

10 to 12

Question Number : 25 Question Id : 7155052675 Question Type : SA Calculator : None

Response Time : N.A Think Time : N.A Minimum Instruction Time : 0

Correct Marks : 4 Wrong Marks : 1

જો $[t]$ એ મહત્તમ પૂર્ણાંક $\leq t$ દર્શાવે, તો વિવૃત્ત અંતરાલ $(-10, 10)$ માં વિધેય $f(x) = [x+x^3] + |x-x^3| + \left|x + \frac{1}{2}\right|$ જ્યાં વિકલનીય ન હોય તેવા બિંદુઓની સંખ્યા _____ છે.

Response Type : Numeric

Evaluation Required For SA : Yes

Show Word Count : Yes

Answers Type : Range

Text Areas : PlainText

Possible Answers :

10 to 12

Question Number : 26 Question Id : 7155052676 Question Type : SA Calculator : None

Response Time : N.A Think Time : N.A Minimum Instruction Time : 0

Correct Marks : 4 Wrong Marks : 1

If $\int \frac{dx}{(3x^2+5)\sqrt{10x^2+7}} = -\frac{1}{\sqrt{580}} \log_e |f(x)| + C$ where C is an arbitrary constant, then $f(0)$ is equal to

Response Type : Numeric

Evaluation Required For SA : Yes

Show Word Count : Yes

Answers Type : Range

Text Areas : PlainText

Possible Answers :

10 to 12

Question Number : 26 Question Id : 7155052676 Question Type : SA Calculator : None

Response Time : N.A Think Time : N.A Minimum Instruction Time : 0

Correct Marks : 4 Wrong Marks : 1

જો $\int \frac{dx}{(3x^2+5)\sqrt{10x^2+7}} = -\frac{1}{\sqrt{580}} \log_e |f(x)| + C$ જ્યાં C સ્વૈર અચળ છે, તો $f(0) =$ _____ .

Response Type : Numeric

Evaluation Required For SA : Yes

Show Word Count : Yes

Answers Type : Range

Text Areas : PlainText

Possible Answers :

10 to 12

Question Number : 27 **Question Id :** 7155052677 **Question Type :** SA **Calculator :** None

Response Time : N.A **Think Time :** N.A **Minimum Instruction Time :** 0

Correct Marks : 4 **Wrong Marks :** 1

Let the equation of the hyperbola with foci (1, 5), (1, -1) and eccentricity $\sqrt{3}$ be $x^2 - 2y^2 + ax + by + c = 0$. Then $|a + b + c|$ is equal to _____.

Response Type : Numeric

Evaluation Required For SA : Yes

Show Word Count : Yes

Answers Type : Range

Text Areas : PlainText

Possible Answers :

10 to 12

Question Number : 27 **Question Id :** 7155052677 **Question Type :** SA **Calculator :** None

Response Time : N.A **Think Time :** N.A **Minimum Instruction Time :** 0

Correct Marks : 4 **Wrong Marks :** 1

જેની નાભિઓ (1, 5), (1, -1) અને ઉત્કેન્દ્રતા $\sqrt{3}$ હોય તેવા અતિવલયનું સમીકરણ $x^2 - 2y^2 + ax + by + c = 0$ છે. તો $|a + b + c| =$ _____.

Response Type : Numeric

Evaluation Required For SA : Yes

Show Word Count : Yes

Answers Type : Range

Text Areas : PlainText

Possible Answers :

10 to 12

Question Number : 28 **Question Id :** 7155052678 **Question Type :** SA **Calculator :** None

Response Time : N.A **Think Time :** N.A **Minimum Instruction Time :** 0

Correct Marks : 4 **Wrong Marks :** 1

Let α_1, α_2 be the values of a such that the distance between the point $(2, 4, 3)$ and the plane $3x + y + az + 10 = 0$ is $\sqrt{35}$ units. Then the area of the triangle with vertices $(\alpha_1, \alpha_2, 0)$, $(\alpha_2, \alpha_1, 0)$ and $(\frac{164}{13}, 5, 0)$ is _____ unit².

Response Type : Numeric

Evaluation Required For SA : Yes

Show Word Count : Yes

Answers Type : Range

Text Areas : PlainText

Possible Answers :

10 to 12

Question Number : 28 **Question Id :** 7155052678 **Question Type :** SA **Calculator :** None

Response Time : N.A **Think Time :** N.A **Minimum Instruction Time :** 0

Correct Marks : 4 **Wrong Marks :** 1

ધારો કે α_1, α_2 એ a ની એવી કિંમતો છે કે જેથી બિંદુ $(2, 4, 3)$ અને સમતલ $3x + y + az + 10 = 0$ વચ્ચેનું અંતર $\sqrt{35}$ એકમ થાય. તો જેના શિરોબિંદુઓ $(\alpha_1, \alpha_2, 0)$, $(\alpha_2, \alpha_1, 0)$ અને $(\frac{164}{13}, 5, 0)$ હોય તેવા ત્રિકોણનું ક્ષેત્રફળ _____ એકમ² છે.

Response Type : Numeric

Evaluation Required For SA : Yes

Show Word Count : Yes

Answers Type : Range

Text Areas : PlainText

Possible Answers :

10 to 12

Question Number : 29 Question Id : 7155052679 Question Type : SA Calculator : None

Response Time : N.A Think Time : N.A Minimum Instruction Time : 0

Correct Marks : 4 Wrong Marks : 1

Let O be the origin and let the vectors $\overline{OA} = -3\hat{i} + 7\hat{j} + 5\hat{k}$, $\overline{OB} = -5\hat{i} + 7\hat{j} - 3\hat{k}$ and $\overline{OC} = \hat{u}$ represent three sides of a parallelepiped, where \hat{u} is a unit vector in the xy - plane. If the maximum volume of the parallelepiped is $2\sqrt{\alpha}$, then α is equal to _____.

Response Type : Numeric

Evaluation Required For SA : Yes

Show Word Count : Yes

Answers Type : Range

Text Areas : PlainText

Possible Answers :

10 to 12

Question Number : 29 Question Id : 7155052679 Question Type : SA Calculator : None

Response Time : N.A Think Time : N.A Minimum Instruction Time : 0

Correct Marks : 4 Wrong Marks : 1

ધારો કે O ઉગમબિંદુ છે અને સદિશો $\overline{OA} = -3\hat{i} + 7\hat{j} + 5\hat{k}$, $\overline{OB} = -5\hat{i} + 7\hat{j} - 3\hat{k}$ એ $\overline{OC} = \hat{u}$ એ એક સમાંતર ફલકની ત્રણ બાજુઓ દર્શાવે છે, જ્યાં \hat{u} એ xy સમતલમાં એક એકમ સદિશ છે. જો આ સમાંતર ફલકનું મહત્તમ ઘનફળ $2\sqrt{\alpha}$ હોય, તો $\alpha =$ _____.

Response Type : Numeric

Evaluation Required For SA : Yes

Show Word Count : Yes

Answers Type : Range

Text Areas : PlainText

Possible Answers :

10 to 12

Question Number : 30 Question Id : 7155052680 Question Type : SA Calculator : None

Response Time : N.A Think Time : N.A Minimum Instruction Time : 0

Correct Marks : 4 Wrong Marks : 1

If the solution curve of the differential equation $\frac{x+y-2}{x+y-1} \frac{dy}{dx} = \frac{x+y+2}{x+y+1}$, $x+y > 2$ passes through the points $(\sqrt{2}, \sqrt{2})$ and $(2, \alpha)$, then $2\alpha - \log_e \left(\frac{\alpha^2 + 4\alpha + 2}{6} \right)$ is equal to _____.

Response Type : Numeric

Evaluation Required For SA : Yes

Show Word Count : Yes

Answers Type : Range

Text Areas : PlainText

Possible Answers :

10 to 12

Question Number : 30 Question Id : 7155052680 Question Type : SA Calculator : None

Response Time : N.A Think Time : N.A Minimum Instruction Time : 0

Correct Marks : 4 Wrong Marks : 1

જો વિકલ સમીકરણ $\frac{x+y-2}{x+y-1} \frac{dy}{dx} = \frac{x+y+2}{x+y+1}$, $x+y > 2$ નો ઉકેલ વક્ર બિંદુઓ $(\sqrt{2}, \sqrt{2})$ અને $(2, \alpha)$ માંથી પસાર

થાય, તો $2\alpha - \log_e \left(\frac{\alpha^2 + 4\alpha + 2}{6} \right) =$ _____.

Response Type : Numeric

Evaluation Required For SA : Yes

Show Word Count : Yes

Answers Type : Range

Text Areas : PlainText

Possible Answers :

10 to 12

Section Id : 715505165
Section Number : 3
Section type : Online
Mandatory or Optional : Mandatory
Number of Questions : 50
Number of Questions to be attempted : 50
Section Marks : 200
Enable Mark as Answered Mark for Review and Clear Response : Yes
Maximum Instruction Time : 0
Sub-Section Number : 1
Sub-Section Id : 715505165
Question Shuffling Allowed : Yes
Is Section Default? : null

Question Number : 31 Question Id : 7155052681 Question Type : MCQ Option Shuffling : Yes Is Question Mandatory : No Calculator : None Response Time : N.A Think Time : N.A Minimum Instruction Time : 0

Correct Marks : 4 Wrong Marks : 1

Adobe is a

Options :

7155058461. Type of cement

7155058462. Type of floor finish

7155058463. Type of paint

7155058464. Type of Brick

Question Number : 31 Question Id : 7155052681 Question Type : MCQ Option Shuffling : Yes Is

Question Mandatory : No Calculator : None Response Time : N.A Think Time : N.A Minimum

Instruction Time : 0

Correct Marks : 4 Wrong Marks : 1

એડોબ એ

Options :

7155058461. સિમેન્ટનો પ્રકાર

7155058462. ફ્લોર ફિનીશનો પ્રકાર

7155058463. રંગનો પ્રકાર

7155058464. ઈંટનો પ્રકાર

Question Number : 32 Question Id : 7155052682 Question Type : MCQ Option Shuffling : Yes Is

Question Mandatory : No Calculator : None Response Time : N.A Think Time : N.A Minimum

Instruction Time : 0

Correct Marks : 4 Wrong Marks : 1

Given below are two statements:

Statement I : Chandigarh is the first planned city of Independent India

Statement II : Chandigarh city was designed by Swiss French architect Le Corbusier

In the light of above statements, choose the **most appropriate** answer form the options given below

Options :

7155058465. Both Statement I and Statement II are correct

7155058466. Both Statement I and Statement II are incorrect

7155058467. Statement I is correct but statement II is incorrect

7155058468. Statement I is incorrect but statement II is correct

Question Number : 32 Question Id : 7155052682 Question Type : MCQ Option Shuffling : Yes Is Question Mandatory : No Calculator : None Response Time : N.A Think Time : N.A Minimum Instruction Time : 0

Correct Marks : 4 Wrong Marks : 1

નીચે બે વિધાનો આપેલા છે.

વિધાન I : ચંદીગઢ એ સ્વતંત્ર ભારતું સૌ પ્રથમ આયોજીત શહેર છે.

વિધાન II : ચંદીગઢ શહેરની રૂપરેખા સ્વીઝ-ફ્રેન્ચ યોજકે ઘડી છે.

ઉપર આપેલા વિધાનો માટે નીચે આપેલા જવાબ માંથી યોગ્ય જવાબ આપો.

Options :

7155058465. બંને વિધાન I અને વિધાન II સાચા છે.

7155058466. બંને વિધાન I અને વિધાન II ખોટા છે.

7155058467. વિધાન I સાચું છે. પણ વિધાન II ખોટું છે.

7155058468. વિધાન I ખોટું છે પણ વિધાન II સાચું છે.

Question Number : 33 Question Id : 7155052683 Question Type : MCQ Option Shuffling : Yes Is Question Mandatory : No Calculator : None Response Time : N.A Think Time : N.A Minimum Instruction Time : 0

Correct Marks : 4 Wrong Marks : 1

Given below are two statements:

Statement I : Glass has low thermal conductivity

Statement II : Glass can absorb, refract and transmit light.

In the light of above statements, choose the most appropriate answer form the options given below

Options :

7155058469. Both Statement I and Statement II are correct

7155058470. Both Statement I and Statement II are incorrect

7155058471. Statement I is correct but statement II is incorrect

7155058472. Statement I is incorrect but statement II is correct

Question Number : 33 Question Id : 7155052683 Question Type : MCQ Option Shuffling : Yes Is

Question Mandatory : No Calculator : None Response Time : N.A Think Time : N.A Minimum

Instruction Time : 0

Correct Marks : 4 Wrong Marks : 1

નીચે આપેલા બે વિધાનો છે.

વિધાનો I : કાંચ નીચી ઉષ્મા વાહકતા ધરાવે છે.

વિધાનો II : કાંચ પ્રકાશને શોષે છે, પ્રત્યાવર્તન (refract) અને પરિવહન કરે છે.

ઉપર આપેલા વિધાનોની દૃષ્ટિએ નીચે આપેલા વિકલ્પો માંથી યોગ્ય જવાબ પસંદ કરો.

Options :

7155058469. બંને વિધાન I અને વિધાન II સાચા છે.

7155058470. બંને વિધાન I અને વિધાન II ખોટા છે.

7155058471. વિધાન I સાચું છે. પણ વિધાન II ખોટું છે.

7155058472. વિધાન I ખોટું છે પણ વિધાન II સાચું છે.

Question Number : 34 Question Id : 7155052684 Question Type : MCQ Option Shuffling : Yes Is

Question Mandatory : No Calculator : None Response Time : N.A Think Time : N.A Minimum

Instruction Time : 0

Correct Marks : 4 Wrong Marks : 1

Match List I with List II

LIST I		LIST II	
A.	PMUY	I.	KAUSHAL VISKAS YOJNA
B.	PMAY	II.	JAN DHAN YOJANA
C.	PMKVY	III.	UJJWALA YOJANA
D.	PMJDY	IV.	AWAS YOJANA

Choose the correct answer from the options given below:

Options :

7155058473. A-I, B-III, C-II, D-IV

7155058474. A-III, B-IV, C-I, D-II

7155058475. A-IV, B-II, C-III, D-I

7155058476. A-IV, B-III, C-I, D-II

Question Number : 34 Question Id : 7155052684 Question Type : MCQ Option Shuffling : Yes Is Question Mandatory : No Calculator : None Response Time : N.A Think Time : N.A Minimum Instruction Time : 0

Correct Marks : 4 Wrong Marks : 1

સૂચિ I સાથે સૂચિ II ને જોડો.

સૂચિ I		સૂચિ II	
A.	PMUY	I.	કૌશલ વિકાસ યોજના
B.	PMAY	II.	જન ધન યોજના
C.	PMKVY	III.	ઉજ્જવલા યોજના
D.	PMJDY	IV.	આવાસ યોજના

નીચે આપેલા વિકલ્પોમાંથી સાચો જવાબ પસંદ કરો.

Options :

7155058473. A-I, B-III, C-II, D-IV

7155058474. A-III, B-IV, C-I, D-II

7155058475. A-IV, B-II, C-III, D-I

7155058476. A-IV, B-III, C-I, D-II

**Question Number : 35 Question Id : 7155052685 Question Type : MCQ Option Shuffling : Yes Is
Question Mandatory : No Calculator : None Response Time : N.A Think Time : N.A Minimum
Instruction Time : 0**

Correct Marks : 4 Wrong Marks : 1

Match List I with List II

LIST I		LIST II	
A.	CP Kukreja	I.	IIM Ahmedabad
B.	Louis I Kahn	II.	Jawahar Lal Nehru University
C.	B.V Doshi	III.	IIT Kanpur
D.	Achyut Kanvinde	IV.	IIM Bengaluru

Choose the correct answer from the options given below:

Options :

7155058477. A-IV, B-II, C-I, D-III

7155058478. A-III, B-I, C-II, D-IV

7155058479. A-II, B-I, C-IV, D-III

7155058480. A-I, B-IV, C-III, D-II

**Question Number : 35 Question Id : 7155052685 Question Type : MCQ Option Shuffling : Yes Is
Question Mandatory : No Calculator : None Response Time : N.A Think Time : N.A Minimum
Instruction Time : 0**

Correct Marks : 4 Wrong Marks : 1

સૂચિ I સાથે સૂચિ II ને જોડો.

સૂચિ I		સૂચિ II	
A.	CP Kukreja	I.	IIM Ahmedabad
B.	Louis I Kahn	II.	Jawahar Lal Nehru University
C.	B.V Doshi	III.	IIT Kanpur
D.	Achyut Kanvinde	IV.	IIM Bengaluru

નીચે આપેલા વિકલ્પોમાંથી સાચો જવાબ પસંદ કરો.

Options :

7155058477. A-IV, B-II, C-I, D-III

7155058478. A-III, B-I, C-II, D-IV

7155058479. A-II, B-I, C-IV, D-III

7155058480. A-I, B-IV, C-III, D-II

Question Number : 36 Question Id : 7155052686 Question Type : MCQ Option Shuffling : Yes Is Question Mandatory : No Calculator : None Response Time : N.A Think Time : N.A Minimum Instruction Time : 0

Correct Marks : 4 Wrong Marks : 1

Which one of these is not a complimentary colour?

Options :

7155058481. Blue-Orange

7155058482. Red-Green

7155058483. Blue-Green

7155058484. Violet-Yellow

Question Number : 36 Question Id : 7155052686 Question Type : MCQ Option Shuffling : Yes Is

Question Mandatory : No Calculator : None Response Time : N.A Think Time : N.A Minimum

Instruction Time : 0

Correct Marks : 4 Wrong Marks : 1

નીચે આપેલા માંથી કયો રંગ પૂરક રંગ નથી ?

Options :

7155058481. વાદળી - નારંગી (કેસરી)

7155058482. લાલ-લીલો

7155058483. વાદળી-લીલો

7155058484. જાંબલી-પીળો

Question Number : 37 Question Id : 7155052687 Question Type : MCQ Option Shuffling : Yes Is

Question Mandatory : No Calculator : None Response Time : N.A Think Time : N.A Minimum

Instruction Time : 0

Correct Marks : 4 Wrong Marks : 1

In which State of India, Robbers cave is situated:

Options :

7155058485. Himachal Pradesh

7155058486. Uttarakhand

7155058487. Uttar Pradesh

7155058488. Madhya Pradesh

Question Number : 37 Question Id : 7155052687 Question Type : MCQ Option Shuffling : Yes Is

Question Mandatory : No Calculator : None Response Time : N.A Think Time : N.A Minimum

Instruction Time : 0

Correct Marks : 4 Wrong Marks : 1

ભારતના કયાં રાજ્યમાં રોબર્સ ગુફા સ્થિત છે ?

Options :

7155058485. હિમાચલ પ્રદેશ

7155058486. ઉત્તરાખંડ

7155058487. ઉત્તર પ્રદેશ

7155058488. મધ્ય પ્રદેશ

Question Number : 38 Question Id : 7155052688 Question Type : MCQ Option Shuffling : Yes Is

Question Mandatory : No Calculator : None Response Time : N.A Think Time : N.A Minimum

Instruction Time : 0

Correct Marks : 4 Wrong Marks : 1

Choose the correct option among the following:

Petronas Tower is situated in:

Options :

7155058489. Paris

7155058490. Dubai

7155058491. Kuala Lumpur

7155058492. New York

Question Number : 38 Question Id : 7155052688 Question Type : MCQ Option Shuffling : Yes Is

Question Mandatory : No Calculator : None Response Time : N.A Think Time : N.A Minimum

Instruction Time : 0

Correct Marks : 4 Wrong Marks : 1

નીચે આપેલા વિકલ્પો માંથી સાચો જવાબ પસંદ કરો.
પેટ્રોનાઝ ટાવર ક્યાં સ્થિત છે ?

Options :

7155058489. પેરિસ

7155058490. દુબઈ

7155058491. કુઆલા લમ્પુર

7155058492. ન્યુયોર્ક

**Question Number : 39 Question Id : 7155052689 Question Type : MCQ Option Shuffling : Yes Is
Question Mandatory : No Calculator : None Response Time : N.A Think Time : N.A Minimum
Instruction Time : 0**

Correct Marks : 4 Wrong Marks : 1

The Konark Temple is located in which state?

Options :

7155058493. Madhya Pradesh

7155058494. Odisha

7155058495. Karnataka

7155058496. Rajasthan

**Question Number : 39 Question Id : 7155052689 Question Type : MCQ Option Shuffling : Yes Is
Question Mandatory : No Calculator : None Response Time : N.A Think Time : N.A Minimum
Instruction Time : 0**

Correct Marks : 4 Wrong Marks : 1

કોણાર્ક મંદિર ક્યાં રાજ્યમાં સ્થિત છે ?

Options :

7155058493. मध्य प्रदेश

7155058494. ओडीशा

7155058495. कर्णाटक

7155058496. राजस्थान

Question Number : 40 Question Id : 7155052690 Question Type : MCQ Option Shuffling : Yes Is

Question Mandatory : No Calculator : None Response Time : N.A Think Time : N.A Minimum

Instruction Time : 0

Correct Marks : 4 Wrong Marks : 1

Who is the architect of the Lotus Temple?

Options :

7155058497. Louis I Kahn

7155058498. Mohse Safdi

7155058499. Fariborz Sahba

7155058500. Richard Meyer

Question Number : 40 Question Id : 7155052690 Question Type : MCQ Option Shuffling : Yes Is

Question Mandatory : No Calculator : None Response Time : N.A Think Time : N.A Minimum

Instruction Time : 0

Correct Marks : 4 Wrong Marks : 1

લોટસ મંદિરના યોજક (આર્કિટેક) કોણ છે ?

Options :

7155058497. લુઈ આઈ કાન

7155058498. મોશે સફદાઈ Mohse Safdi

7155058499. ફરીબોર્જ સહબા

7155058500. રિચર્ડ મેયર

Question Number : 41 Question Id : 7155052691 Question Type : MCQ Option Shuffling : Yes Is Question Mandatory : No Calculator : None Response Time : N.A Think Time : N.A Minimum Instruction Time : 0

Correct Marks : 4 Wrong Marks : 1

A small lift for carrying only a small load is known as:

Options :

7155058501. A dead Bearer

7155058502. A Dumb Waiter

7155058503. A Jockey Boy

7155058504. A push upper

Question Number : 41 Question Id : 7155052691 Question Type : MCQ Option Shuffling : Yes Is Question Mandatory : No Calculator : None Response Time : N.A Think Time : N.A Minimum Instruction Time : 0

Correct Marks : 4 Wrong Marks : 1

ઓછા વજન વાળા સામાનને લઈ જવા માટે વપરાતી નાની લિફ્ટને શું કહેવામાં આવે છે ?

Options :

7155058501. A dead Bearer

7155058502. A Dumb Waiter

7155058503. A Jockey Boy

7155058504. A push upper

Question Number : 42 Question Id : 7155052692 Question Type : MCQ Option Shuffling : Yes Is

Question Mandatory : No Calculator : None Response Time : N.A Think Time : N.A Minimum

Instruction Time : 0

Correct Marks : 4 Wrong Marks : 1

Which are often referred as 'twin cities' of Odisha?

Options :

7155058505. Bhubaneshwar-Puri

7155058506. Puri-Cuttack

7155058507. Bhubaneshwar-Cuttack

7155058508. Bhubaneshwar-Rourkela

Question Number : 42 Question Id : 7155052692 Question Type : MCQ Option Shuffling : Yes Is

Question Mandatory : No Calculator : None Response Time : N.A Think Time : N.A Minimum

Instruction Time : 0

Correct Marks : 4 Wrong Marks : 1

નીચે આપેલા માંથી કોને ઓડિશાના 'ટવીન સીટીઝ' ('twin cities') તરીકે ઓળખવામાં આવે છે ?

Options :

7155058505. ભુવનેશ્વર - પૂરી

7155058506. પુરી-કટક

7155058507. ભુવનેશ્વર - કટક

7155058508. ભુવનેશ્વર - રાઉરકેલા

Question Number : 43 Question Id : 7155052693 Question Type : MCQ Option Shuffling : Yes Is Question Mandatory : No Calculator : None Response Time : N.A Think Time : N.A Minimum Instruction Time : 0

Correct Marks : 4 Wrong Marks : 1

Which is the correct chronology of Human Civilizations in terms of their existence?

Options :

7155058509. Mesopotamia-Harappa-Egyptian-Chinese

7155058510. Mesopotamia-Egyptian-Harappa-Chinese

7155058511. Mesopotamia-Chinese-Harappa-Egyptian

7155058512. Egyptian-Mesopotamia-Harappa-Sumerian

Question Number : 43 Question Id : 7155052693 Question Type : MCQ Option Shuffling : Yes Is Question Mandatory : No Calculator : None Response Time : N.A Think Time : N.A Minimum Instruction Time : 0

Correct Marks : 4 Wrong Marks : 1

તેમના અસ્તિત્વના સંદર્ભમાં માનવ સંસ્કૃતિઓનો સાચો ઘટનાક્રમ કયો છે ?

Options :

7155058509. મેસોપોટેમીયા-હડપ્પા-ઇજિપ્શીયન-ચાઇનીઝ

7155058510. મેસોપોટેમીયા-ઇજિપ્શીયન-હડપ્પા-ચાઇનીઝ

7155058511. મેસોપોટેમીયા-ચાઇનીઝ-હડપ્પા-ઇજિપ્શીયન

7155058512. ઇજિપ્શીયન-મેસોપોટેમીયા-હડપ્પા-સુમેરિયન

Question Number : 44 Question Id : 7155052694 Question Type : MCQ Option Shuffling : Yes Is Question Mandatory : No Calculator : None Response Time : N.A Think Time : N.A Minimum Instruction Time : 0

Correct Marks : 4 Wrong Marks : 1

Qutub-Minar in Delhi was built by:

Options :

7155058513. Shah Jahan

7155058514. Jahangir

7155058515. Akbar

7155058516. Qutub ud-din Aibak

Question Number : 44 Question Id : 7155052694 Question Type : MCQ Option Shuffling : Yes Is Question Mandatory : No Calculator : None Response Time : N.A Think Time : N.A Minimum Instruction Time : 0

Correct Marks : 4 Wrong Marks : 1

દિલ્હી સ્થિત કુતુબ મિનાર કોના દ્વારા નિર્મિત કરવા માં આવ્યું હતું ?

Options :

7155058513. શાહજહાં

7155058514. જહાંગીર

7155058515. અકબર

7155058516. કુતુબ - ઉદ્દીન એબક

Question Number : 45 Question Id : 7155052695 Question Type : MCQ Option Shuffling : Yes Is Question Mandatory : No Calculator : None Response Time : N.A Think Time : N.A Minimum Instruction Time : 0

Correct Marks : 4 Wrong Marks : 1

Which direction in the southern hemisphere would you get glare free (diffused) light throughout the year?

Options :

7155058517. North

7155058518. South

7155058519. East

7155058520. West

Question Number : 45 Question Id : 7155052695 Question Type : MCQ Option Shuffling : Yes Is Question Mandatory : No Calculator : None Response Time : N.A Think Time : N.A Minimum Instruction Time : 0

Correct Marks : 4 Wrong Marks : 1

દક્ષિણ ગોળાર્ધમાં તમે આખું વર્ષ કઈ દિશામાં ઝવેર મુક્ત પ્રકાશ (ઝાંખો) મેળવશો ?

Options :

7155058517. ઉત્તર

7155058518. દક્ષિણ

7155058519. પૂર્વ

7155058520. પશ્ચિમ

Question Number : 46 Question Id : 7155052696 Question Type : MCQ Option Shuffling : Yes Is Question Mandatory : No Calculator : None Response Time : N.A Think Time : N.A Minimum Instruction Time : 0

Correct Marks : 4 Wrong Marks : 1

Who is the architect of the famous "Jawaharlal Kala Complex" in Jaipur?

Options :

7155058521. Raj Rewal

7155058522. Charles Correa

7155058523. Achyut Kanvinde

7155058524. Hafeez Contractor

Question Number : 46 Question Id : 7155052696 Question Type : MCQ Option Shuffling : Yes Is Question Mandatory : No Calculator : None Response Time : N.A Think Time : N.A Minimum Instruction Time : 0

Correct Marks : 4 Wrong Marks : 1

જયપૂર સ્થિત પ્રખ્યાત "જવાહરલાલ કલા કોમ્પ્લેક્સ"ના યોજક કોણ હતા ?

Options :

7155058521. રાજ રેવલ

7155058522. ચાર્લ્સ કોરિયા

7155058523. અચ્યુત કાનવિન્દે

7155058524. હાફીઝ કોન્ટ્રાક્ટર

Question Number : 47 Question Id : 7155052697 Question Type : MCQ Option Shuffling : Yes Is Question Mandatory : No Calculator : None Response Time : N.A Think Time : N.A Minimum Instruction Time : 0

Correct Marks : 4 Wrong Marks : 1

Dhajji-Dewari is a construction style popular predominantly in _____.

Options :

7155058525. Coastal Areas

7155058526. Plains

7155058527. Mountainous Region

7155058528. Desert Areas

Question Number : 47 Question Id : 7155052697 Question Type : MCQ Option Shuffling : Yes Is Question Mandatory : No Calculator : None Response Time : N.A Think Time : N.A Minimum Instruction Time : 0

Correct Marks : 4 Wrong Marks : 1

એક બાંધકામ શૈલી ધજજી-દેવરી (Dhajji-Dewari) જે મુખ્યત્વે જ્યાં જોવા મળે છે તે _____.

Options :

7155058525. દરિયા કાઠાના વિસ્તારો

7155058526. મેદાનો

7155058527. પર્વતીય વિસ્તાર

7155058528. રણ વિસ્તારો

Question Number : 48 Question Id : 7155052698 Question Type : MCQ Option Shuffling : Yes Is Question Mandatory : No Calculator : None Response Time : N.A Think Time : N.A Minimum

Instruction Time : 0

Correct Marks : 4 Wrong Marks : 1

Which stone is used for roofing in mountainous regions?

Options :

7155058529. Marble

7155058530. Granite

7155058531. Shale

7155058532. Sand Stone

Question Number : 48 Question Id : 7155052698 Question Type : MCQ Option Shuffling : Yes Is

Question Mandatory : No Calculator : None Response Time : N.A Think Time : N.A Minimum

Instruction Time : 0

Correct Marks : 4 Wrong Marks : 1

પર્વતીય પ્રદેશોમાં છત માટે કયાં પથ્થરનો ઉપયોગ થાય છે ?

Options :

7155058529. માર્બલ

7155058530. ગ્રેનાઈટ

7155058531. શૈલ

7155058532. સેન્ડ સ્ટોન

Question Number : 49 Question Id : 7155052699 Question Type : MCQ Option Shuffling : Yes Is

Question Mandatory : No Calculator : None Response Time : N.A Think Time : N.A Minimum

Instruction Time : 0

Correct Marks : 4 Wrong Marks : 1

Chandigarh is an example of which type of city planning.

Options :

7155058533. Radio Centric

7155058534. Grid-iron

7155058535. Linear

7155058536. Organic

Question Number : 49 Question Id : 7155052699 Question Type : MCQ Option Shuffling : Yes Is

Question Mandatory : No Calculator : None Response Time : N.A Think Time : N.A Minimum

Instruction Time : 0

Correct Marks : 4 Wrong Marks : 1

ચંદીગઢ એ કયાં પ્રકારનું શહેર આયોજનનું ઉદાહરણ છે ?

Options :

7155058533. રેડિયો સેન્ટ્રીક

7155058534. ગ્રીડ-આયર્ન

7155058535. રેખીય/ લીનિયર

7155058536. ઓર્ગેનિક

Question Number : 50 Question Id : 7155052700 Question Type : MCQ Option Shuffling : Yes Is

Question Mandatory : No Calculator : None Response Time : N.A Think Time : N.A Minimum

Instruction Time : 0

Correct Marks : 4 Wrong Marks : 1

If you have to build on the seashore in Goa, which rooms would have the best view of the sea?

Options :

7155058537. Those facing North

7155058538. Those facing South

7155058539. Those facing East

7155058540. Those facing West

Question Number : 50 Question Id : 7155052700 Question Type : MCQ Option Shuffling : Yes Is

Question Mandatory : No Calculator : None Response Time : N.A Think Time : N.A Minimum

Instruction Time : 0

Correct Marks : 4 Wrong Marks : 1

જો તમારે ગોવાના દરિયાકિનારે બાંધકામ કરવાનું હોય તો, ક્યાં ખંડમાંથી સમુદ્રનો શ્રેષ્ઠ નજારો જોવા મળશે ?

Options :

7155058537. જેનું મૂખ ઉત્તર તરફ હોય

7155058538. જેનું મૂખ દક્ષિણ તરફ હોય

7155058539. જેનું મૂખ પૂર્વ તરફ હોય

7155058540. જેનું મૂખ પશ્ચિમ તરફ હોય

Question Number : 51 Question Id : 7155052701 Question Type : MCQ Option Shuffling : Yes Is

Question Mandatory : No Calculator : None Response Time : N.A Think Time : N.A Minimum

Instruction Time : 0

Correct Marks : 4 Wrong Marks : 1

"NIFT" National Institute of Fashion Technology, Delhi is designed by

Options :

7155058541. B.V Doshi

7155058542. C.P Kukreja

7155058543. Raj Rewal

7155058544. Bimal Patel

**Question Number : 51 Question Id : 7155052701 Question Type : MCQ Option Shuffling : Yes Is
Question Mandatory : No Calculator : None Response Time : N.A Think Time : N.A Minimum
Instruction Time : 0**

Correct Marks : 4 Wrong Marks : 1

"NIFT" National Institute of Fashion Technology, Delhi એ કોના દ્વારા સંચાલિત આવેલ છે ?

Options :

7155058541. બી. વી દોશી

7155058542. સી. પી કુકરેજા





7155058543. રાજ રેવાલ

7155058544. બીમલ પટેલ

**Question Number : 52 Question Id : 7155052702 Question Type : MCQ Option Shuffling : Yes Is
Question Mandatory : No Calculator : None Response Time : N.A Think Time : N.A Minimum
Instruction Time : 0**

Correct Marks : 4 Wrong Marks : 1

Match List I with List II

LIST I		LIST II	
A.		I.	Empire state Building
B.		II.	Hagia Sophia
C.		III.	Sydney Opera House
D.		IV.	Colosseum

Choose the correct answer from the options given below:

Options :

7155058545. A-II, B-I, C-IV, D-III

7155058546. A-I, B-III, C-IV, D-II





7155058547. A-I, B-II, C-III, D-IV

7155058548. A-IV, B-III, C-II, D-I

Question Number : 52 Question Id : 7155052702 Question Type : MCQ Option Shuffling : Yes Is Question Mandatory : No Calculator : None Response Time : N.A Think Time : N.A Minimum Instruction Time : 0

Correct Marks : 4 Wrong Marks : 1

સૂચિ I સાથે સૂચિ II ને જોડો.

	સૂચિ I		સૂચિ II
A.		I.	એમ્પાયર સ્ટેટ બિલ્ડિંગ
B.		II.	હાગિયા સોફિયા
C.		III.	સિડની ઓપેરા હાઉસ
D.		IV.	કોલોસીયમ

નીચે આપેલા વિકલ્પોમાંથી સાચો જવાબ પસંદ કરો.

Options :

7155058545. A-II, B-I, C-IV, D-III





7155058546. A-I, B-III, C-IV, D-II

7155058547. A-I, B-II, C-III, D-IV

7155058548. A-IV, B-III, C-II, D-I

Question Number : 53 Question Id : 7155052703 Question Type : MCQ Option Shuffling : Yes Is Question Mandatory : No Calculator : None Response Time : N.A Think Time : N.A Minimum Instruction Time : 0

Correct Marks : 4 Wrong Marks : 1
Match List I with List II

LIST I		LIST II	
A.		I.	Tesla
B.		II.	Ferrari
C.		III.	Porsche
D.		IV.	Toyota

Choose the correct answer from the options given below:

Options :

7155058549. A-IV, B-I, C-II, D-III

7155058550. A-II, B-III, C-I, D-IV





7155058551. A-III, B-II, C-I, D-IV

7155058552. A-IV, B-III, C-II, D-I

Question Number : 53 Question Id : 7155052703 Question Type : MCQ Option Shuffling : Yes Is
Question Mandatory : No Calculator : None Response Time : N.A Think Time : N.A Minimum
Instruction Time : 0

Correct Marks : 4 Wrong Marks : 1

સૂચિ I સાથે સૂચિ II ને જોડો.

સૂચિ I		સૂચિ II	
A.		I.	ટેસ્લા
B.		II.	ફેરારી
C.		III.	પોર્શ
D.		IV.	ટોયોટા

નીચે આપેલા વિકલ્પોમાંથી સાચો જવાબ પસંદ કરો.

Options :

7155058549. A-IV, B-I, C-II, D-III

7155058550. A-II, B-III, C-I, D-IV

7155058551. A-III, B-II, C-I, D-IV

7155058552. A-IV, B-III, C-II, D-I

Question Number : 54 Question Id : 7155052704 Question Type : MCQ Option Shuffling : Yes Is Question Mandatory : No Calculator : None Response Time : N.A Think Time : N.A Minimum Instruction Time : 0

Correct Marks : 4 Wrong Marks : 1

Given below are two statements:

Statement I : Red, Blue and Yellow are the primary colours of a colour wheel.

Statement II : The colours which are positioned opposite to each other in a colour wheel are known as complementary colours.

In the light of above statements, choose the correct answer form the options given below

Options :

7155058553. Both Statement I and Statement II are correct

7155058554. Both Statement I and Statement II are incorrect

7155058555. Statement I is correct but statement II is incorrect

7155058556. Statement I is incorrect but statement II is correct

Question Number : 54 Question Id : 7155052704 Question Type : MCQ Option Shuffling : Yes Is Question Mandatory : No Calculator : None Response Time : N.A Think Time : N.A Minimum Instruction Time : 0

Correct Marks : 4 Wrong Marks : 1

નીચે બે વિધાનો આપેલા છે.

વિધાન I : લાલ, વાદળી અને પીળો રંગ ચક્રના પ્રાથમિક રંગો છે.

વિધાન II : રંગ ચક્રમાં એક બીજાની વિરુદ્ધ સ્થિત થયેલા રંગોને પૂરક રંગો તરીકે ઓળખવામાં આવે છે.

ઉપર આપેલા વિધાનોના સંદર્ભમાં, નીચે આપેલા વિકલ્પોમાંથી સાચો જવાબ પસંદ કરો.

Options :

7155058553. બંને વિધાન I અને વિધાન II સાચા છે.

7155058554. બંને વિધાન I અને વિધાન II ખોટા છે.

7155058555. વિધાન I સાચું છે. પણ વિધાન II ખોટું છે.

7155058556. વિધાન I ખોટું છે પણ વિધાન II સાચું છે.

Question Number : 55 Question Id : 7155052705 Question Type : MCQ Option Shuffling : Yes Is

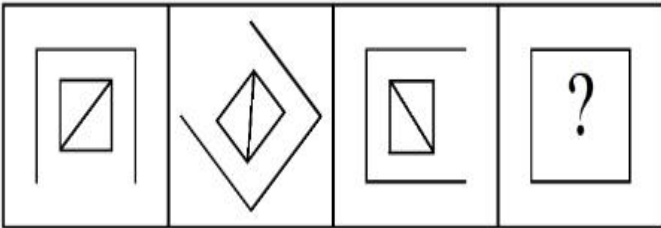
Question Mandatory : No Calculator : None Response Time : N.A Think Time : N.A Minimum

Instruction Time : 0

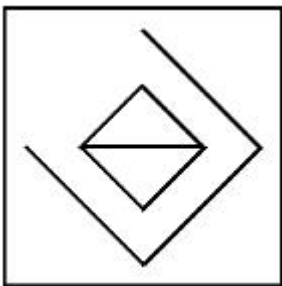
Correct Marks : 4 Wrong Marks : 1

Following question consists of problem figures followed by answer figures. Select a figure from amongst the answer figures which will continue the same series or pattern as established by the problem figures.

PROBLEM FIGURES

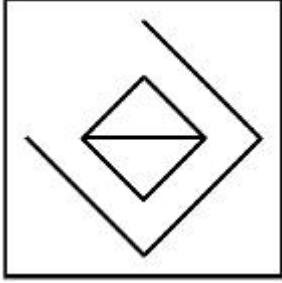
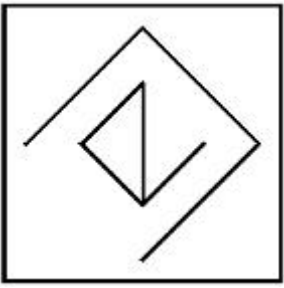


Options :

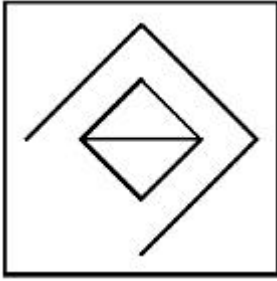


7155058557.

7155058558.



7155058559.



7155058560.

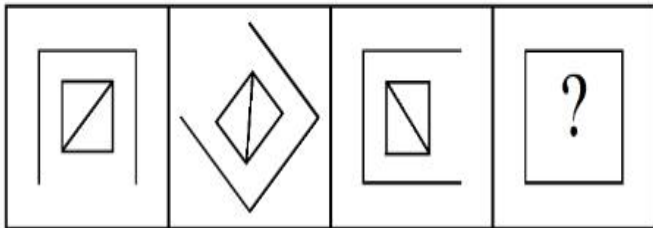
Question Number : 55 Question Id : 7155052705 Question Type : MCQ Option Shuffling : Yes Is

Question Mandatory : No Calculator : None Response Time : N.A Think Time : N.A Minimum

Instruction Time : 0

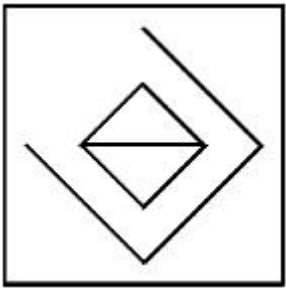
Correct Marks : 4 Wrong Marks : 1

નીચે આપેલા પ્રશ્નો સમસ્યાપૂર્ણ આકૃતિ ધરાવે છે જેમના જવાબો નીચે જવાબની આકૃતિઓ માં આપેલા છે. જવાબ આકૃતિ માંથી તેવી આકૃતિ પસંદ કરો જે પ્રશ્ન માં આપેલી આકૃતિ ને આગળ ચાલું રાખતું હોય.

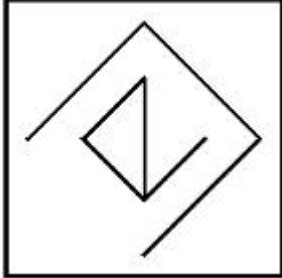


Options :

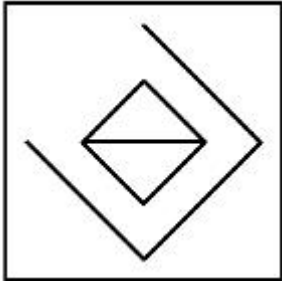
7155058557.



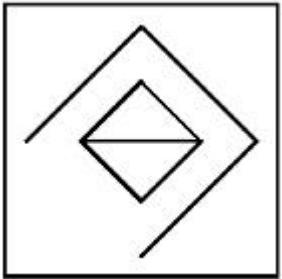
7155058558.



7155058559.



7155058560.



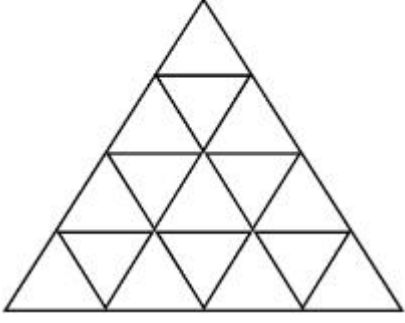
Question Number : 56 Question Id : 7155052706 Question Type : MCQ Option Shuffling : Yes Is

Question Mandatory : No Calculator : None Response Time : N.A Think Time : N.A Minimum

Instruction Time : 0

Correct Marks : 4 Wrong Marks : 1

How many triangles are there in given figure:-



Options :

7155058561. 26

7155058562. 25

7155058563. 27

7155058564. 24

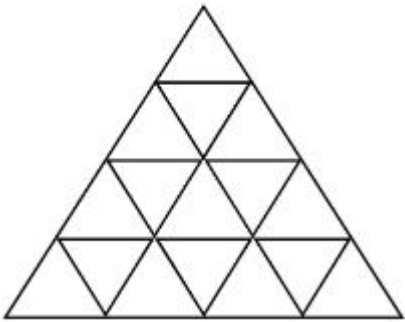
Question Number : 56 Question Id : 7155052706 Question Type : MCQ Option Shuffling : Yes Is

Question Mandatory : No Calculator : None Response Time : N.A Think Time : N.A Minimum

Instruction Time : 0

Correct Marks : 4 Wrong Marks : 1

નીચે આપેલી આકૃતિમાં કેટલા ત્રિકોણો છે ?



Options :

7155058561. 26

7155058562. 25

7155058563. 27

7155058564. 24

Question Number : 57 Question Id : 7155052707 Question Type : MCQ Option Shuffling : Yes Is Question Mandatory : No Calculator : None Response Time : N.A Think Time : N.A Minimum Instruction Time : 0

Correct Marks : 4 Wrong Marks : 1

Find the odd one out:-

7, 9, 25, 32, 43, 59

Options :

7155058565. 59

7155058566. 32

7155058567. 25

7155058568. 9

Question Number : 57 Question Id : 7155052707 Question Type : MCQ Option Shuffling : Yes Is Question Mandatory : No Calculator : None Response Time : N.A Think Time : N.A Minimum Instruction Time : 0

Correct Marks : 4 Wrong Marks : 1

વિચિત્ર છે તેને શોધો.

7, 9, 25, 32, 43, 59

Options :

7155058565. 59

7155058566. 32

7155058567. 25

7155058568. 9

Question Number : 58 Question Id : 7155052708 Question Type : MCQ Option Shuffling : Yes Is

Question Mandatory : No Calculator : None Response Time : N.A Think Time : N.A Minimum

Instruction Time : 0

Correct Marks : 4 Wrong Marks : 1

A residential building has 15 floors. The height of ground floor is 4.2 meter (including length and slab thickness). Rest all other floors are of 3.3 meter high (including slab thickness). What is the total height of the building (from ground to terrace) in meters?

Options :

7155058569. 45.6 meter

7155058570. 50 meter

7155058571. 50.4 meter

7155058572. 51.6 meter

Question Number : 58 Question Id : 7155052708 Question Type : MCQ Option Shuffling : Yes Is

Question Mandatory : No Calculator : None Response Time : N.A Think Time : N.A Minimum

Instruction Time : 0

Correct Marks : 4 Wrong Marks : 1

એર રેસિડેન્શિયલ બિલ્ડિંગમાં (રહેણાંક ભવન) 15 માળ ધરાવે છે. ભોયતળિયાની ઉંચાઈ 4.2 મીટર (લંબાઈ અને સ્લેબની જાડાઈ સહિત) છે. બાકીના તમામ માળ 3.3 મીટર ઉંચા (સ્લેબની જાડાઈ સહિત) છે. તો ઈમારતની (ભવનની) કુલ ઉંચાઈ (જમીનથી અગાશી સુધી) મીટર કેટલી છે ?

Options :

7155058569. 45.6 મીટર

7155058570. 50 મીટર

7155058571. 50.4 મીટર

7155058572. 51.6 મીટર

Question Number : 59 Question Id : 7155052709 Question Type : MCQ Option Shuffling : Yes Is

Question Mandatory : No Calculator : None Response Time : N.A Think Time : N.A Minimum

Instruction Time : 0

Correct Marks : 4 Wrong Marks : 1

Identify the mirror image of the given word:-

SUCCESS



Options :

7155058573. 22ECCU2

7155058574. 22ECCU2

7155058575. SUCCESS

7155058576. SSECCUS

Question Number : 59 Question Id : 7155052709 Question Type : MCQ Option Shuffling : Yes Is

Question Mandatory : No Calculator : None Response Time : N.A Think Time : N.A Minimum

Instruction Time : 0

Correct Marks : 4 Wrong Marks : 1

નીચે આપેલા શબ્દના અરીસાની છબી આરસી પ્રતિબિંબ શોધો.

SUCCESS

Options :

7155058573. 22ECC22

7155058574. 22ECC22

7155058575. SUCCESS

7155058576. SSECCUS

Question Number : 60 Question Id : 7155052710 Question Type : MCQ Option Shuffling : Yes Is

Question Mandatory : No Calculator : None Response Time : N.A Think Time : N.A Minimum

Instruction Time : 0

Correct Marks : 4 Wrong Marks : 1

The scale of a map is 1:1000. If a car travels 7 cm from point 'A' to point 'B' on the Map. Then how much the car has travelled in original:-

Options :

7155058577. 0.7 km

7155058578. 7000 mm

7155058579. 7 km

7155058580. 70 meter

Question Number : 60 Question Id : 7155052710 Question Type : MCQ Option Shuffling : Yes Is

Question Mandatory : No Calculator : None Response Time : N.A Think Time : N.A Minimum

Instruction Time : 0

Correct Marks : 4 Wrong Marks : 1

નકશાનું માપ 1:1000 છે. જો કોઈ ગાડી 7 cm બિંદુ 'A' થી બિંદુ 'B' સુધી નકશા ઉપર મુસાફરી કરે છે, તો તે ગાડીએ હકકીતમાં કેટલી મુસાફરી કરી છે ?

Options :

7155058577. 0.7 કી.મી.

7155058578. 7000 એમ.એમ.

7155058579. 7 કી.મી.

7155058580. 70 મીટર

Question Number : 61 Question Id : 7155052711 Question Type : MCQ Option Shuffling : Yes Is

Question Mandatory : No Calculator : None Response Time : N.A Think Time : N.A Minimum

Instruction Time : 0

Correct Marks : 4 Wrong Marks : 1

A land size of 80 meter \times 40 meter for a house design is drawn on paper at a scale of 1:100, then what size is drawn on paper to represent the land?

Options :

7155058581. 8 meter \times 4 meter

7155058582. 80 meter \times 40 meter

7155058583. 8 centimeter \times 4 centimeter

7155058584. 4 meter \times 2 meter

Question Number : 61 Question Id : 7155052711 Question Type : MCQ Option Shuffling : Yes Is

Question Mandatory : No Calculator : None Response Time : N.A Think Time : N.A Minimum

Instruction Time : 0

Correct Marks : 4 Wrong Marks : 1

ધરની ડિઝાઇન માટે 80 મીટર \times 40 મીટર ની જમીન કાગળ પર 1:100 ના સ્કેલ પર દોરવામાં આવે છે, તો પછી જમીન માટે કાગળ પર કયો માપ દોરવામાં આવે છે ?

Options :

7155058581. 8 મીટર \times 4 મીટર

7155058582. 80 મીટર \times 40 મીટર

7155058583. 8 સેન્ટીમીટર \times 4 સેન્ટીમીટર

7155058584. 4 મીટર \times 2 મીટર

Question Number : 62 Question Id : 7155052712 Question Type : MCQ Option Shuffling : Yes Is

Question Mandatory : No Calculator : None Response Time : N.A Think Time : N.A Minimum

Instruction Time : 0

Correct Marks : 4 Wrong Marks : 1

Find the missing number in given series.

16, 33, 65, 131, 261, (.....)

Options :

7155058585. 523

7155058586. 521

7155058587. 524

7155058588. 520

Question Number : 62 Question Id : 7155052712 Question Type : MCQ Option Shuffling : Yes Is

Question Mandatory : No Calculator : None Response Time : N.A Think Time : N.A Minimum

Instruction Time : 0

Correct Marks : 4 Wrong Marks : 1

નીચે આપેલી શ્રેણીઓ માંથી ખૂટતો આંકડો (missing number) શોધો.

16, 33, 65, 131, 261, (.....)

Options :

7155058585. 523

7155058586. 521

7155058587. 524

7155058588. 520

Question Number : 63 Question Id : 7155052713 Question Type : MCQ Option Shuffling : Yes Is

Question Mandatory : No Calculator : None Response Time : N.A Think Time : N.A Minimum

Instruction Time : 0

Correct Marks : 4 Wrong Marks : 1

In a code language if ROMAN is written as TQOCP: then ITALY is.....

Options :

7155058589. KVCMA

7155058590. KWCNB

7155058591. KUCLA

7155058592. KVCNA

Question Number : 63 Question Id : 7155052713 Question Type : MCQ Option Shuffling : Yes Is

Question Mandatory : No Calculator : None Response Time : N.A Think Time : N.A Minimum

Instruction Time : 0

Correct Marks : 4 Wrong Marks : 1

જો સંકેતિક ભાષામાં ROMAN ને TQOCP લખાય તો, ITALY ને કેવી રીતે લખાય ?

Options :

7155058589. KVCMA

7155058590. KWCNB

7155058591. KUCLA

7155058592. KVCNA

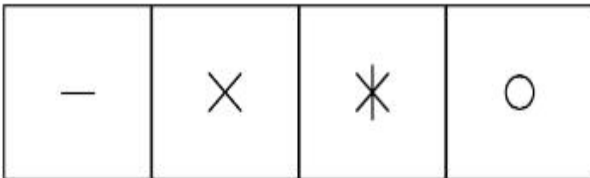
Question Number : 64 Question Id : 7155052714 Question Type : MCQ Option Shuffling : Yes Is

Question Mandatory : No Calculator : None Response Time : N.A Think Time : N.A Minimum


Instruction Time : 0

Correct Marks : 4 Wrong Marks : 1

Select a suitable figure from the four alternatives which will come in the empty box.



(A) (B) (C) (D)



Options :

7155058593. D

7155058594. C

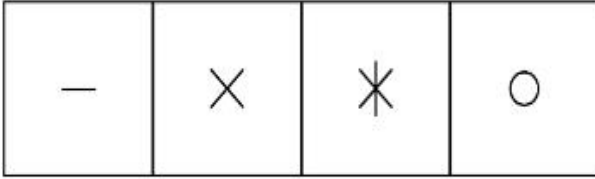
7155058595. B

7155058596. A


Question Number : 64 Question Id : 7155052714 Question Type : MCQ Option Shuffling : Yes Is Question Mandatory : No Calculator : None Response Time : N.A Think Time : N.A Minimum Instruction Time : 0

Correct Marks : 4 Wrong Marks : 1

નીચ આપેલા 4 વિકલ્પો માંથી બંધ બેસતી આકૃતિ શોધો જે ખાલી બોક્સમાં આવી શકે ?



(A) (B) (C) (D)



Options :

7155058593. D

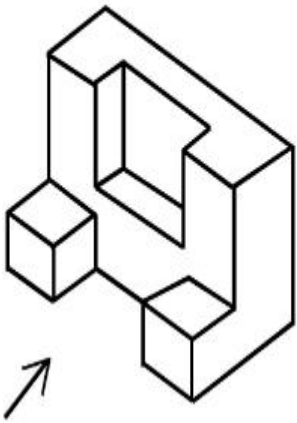
7155058594. C

7155058595. B

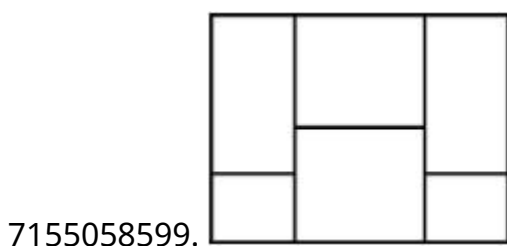
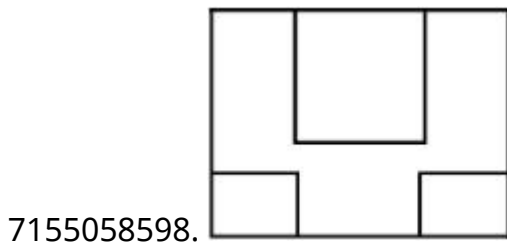
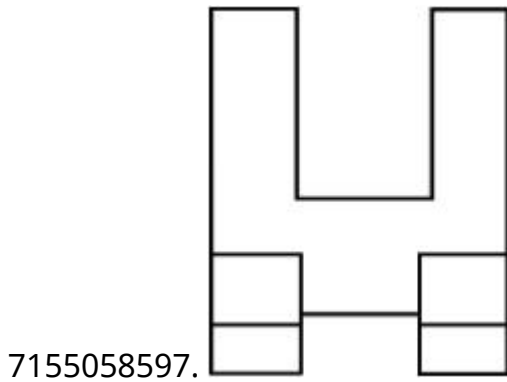
Question Number : 65 Question Id : 7155052715 Question Type : MCQ Option Shuffling : Yes Is Question Mandatory : No Calculator : None Response Time : N.A Think Time : N.A Minimum Instruction Time : 0

Correct Marks : 4 Wrong Marks : 1

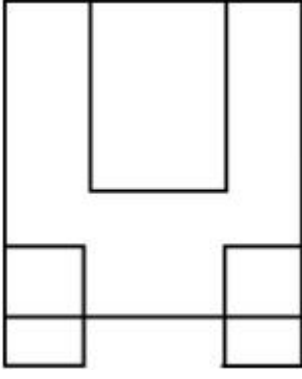
The 3D figure shows the view of an object. Looking in the direction of arrow, identify the most appropriate elevation from the given answer figures.



Options :



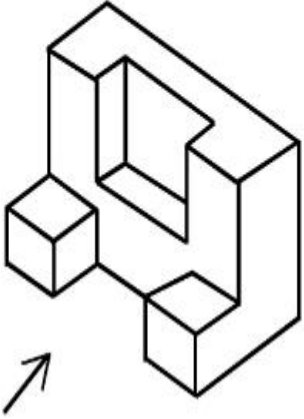
7155058600.



Question Number : 65 Question Id : 7155052715 Question Type : MCQ Option Shuffling : Yes Is Question Mandatory : No Calculator : None Response Time : N.A Think Time : N.A Minimum Instruction Time : 0

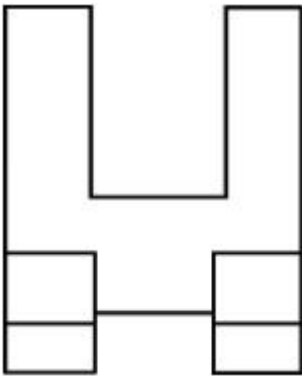
Correct Marks : 4 Wrong Marks : 1

3D ચિત્ર એક પદાર્થને દર્શાવે છે. ત્રીજી દિશામાં જોતા, નીચે આપેલી આકૃતિઓ માંથી સૌથી યોગ્ય એલીવેશન ધરાવતી આકૃતિ શોધો.

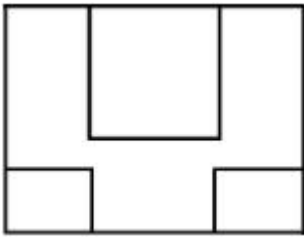


Options :

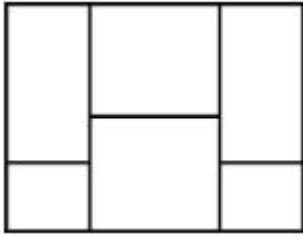
7155058597.



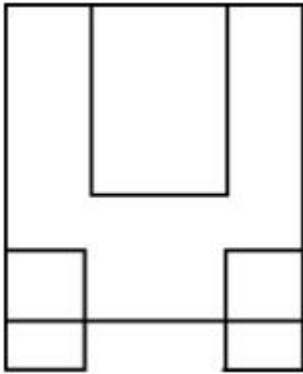
7155058598.



7155058599.



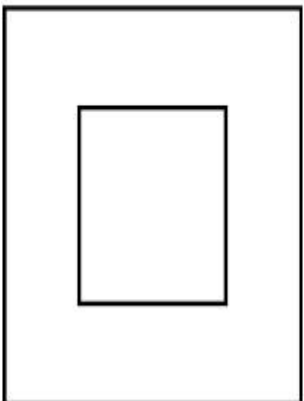
7155058600.



Question Number : 66 Question Id : 7155052716 Question Type : MCQ Option Shuffling : Yes Is Question Mandatory : No Calculator : None Response Time : N.A Think Time : N.A Minimum Instruction Time : 0

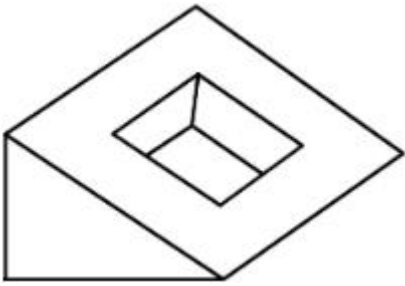
Correct Marks : 4 Wrong Marks : 1

Question figure shows top view/ plan of an object. Identify the INCORRECT 3D view from the given answers figure.

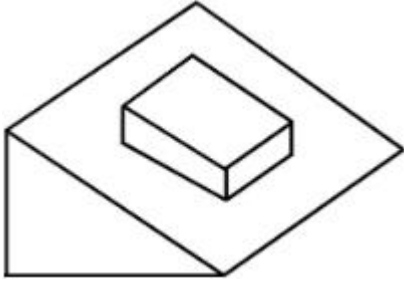


Options :


7155058601.



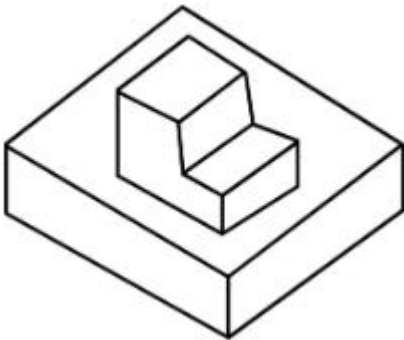
7155058602.



7155058603.




7155058604.

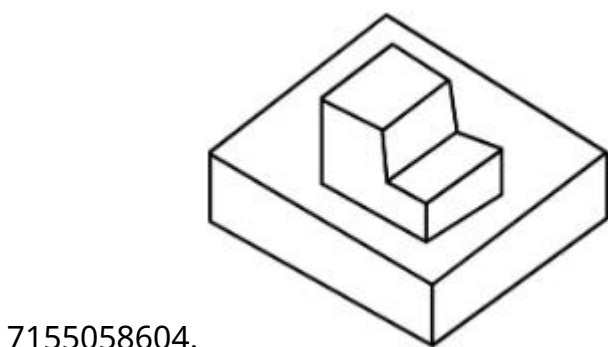
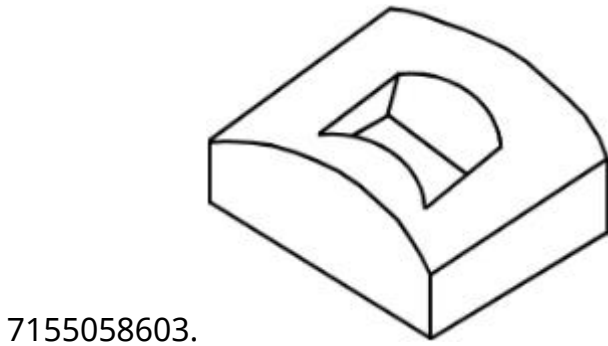
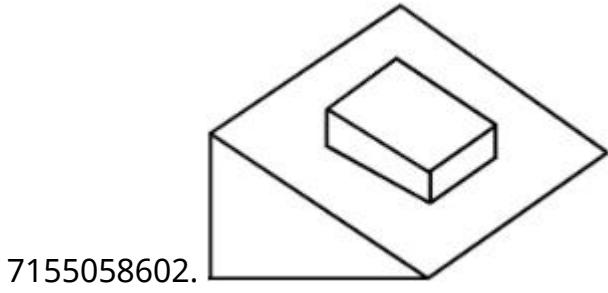
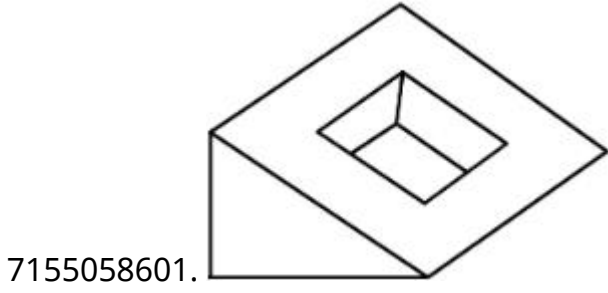


Question Number : 66 Question Id : 7155052716 Question Type : MCQ Option Shuffling : Yes Is Question Mandatory : No Calculator : None Response Time : N.A Think Time : N.A Minimum Instruction Time : 0 Correct Marks : 4 Wrong Marks : 1

પ્રશ્નમા આપેલી આકૃતિ પદાર્થનું ટોચનું દૃશ્ય / પ્લાન દર્શાવે છે. નીચે આપેલી આકૃતિઓ માંથી ખોટી 3D દેખાવ વાળી આકૃતિ શોધો.



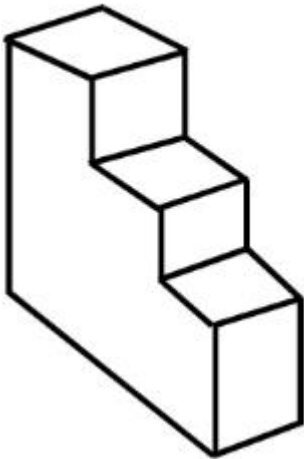
Options :



Question Number : 67 Question Id : 7155052717 Question Type : MCQ Option Shuffling : Yes Is Question Mandatory : No Calculator : None Response Time : N.A Think Time : N.A Minimum Instruction Time : 0

Correct Marks : 4 Wrong Marks : 1

How many surfaces does the object have?



Options :

7155058605. 9

7155058606. 10

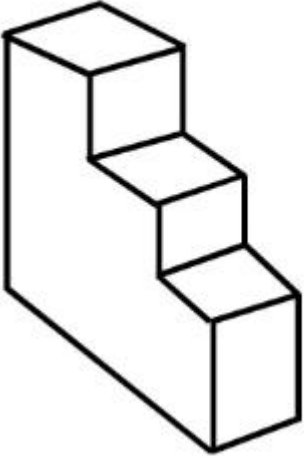
7155058607. 8

7155058608. 11

Question Number : 67 Question Id : 7155052717 Question Type : MCQ Option Shuffling : Yes Is Question Mandatory : No Calculator : None Response Time : N.A Think Time : N.A Minimum Instruction Time : 0

Correct Marks : 4 Wrong Marks : 1

નીચે આપેલાં પદાર્થમાં કેટલી સપાટીઓ આવેલી છે ?



Options :

7155058605. 9

7155058606. 10

7155058607. 8

7155058608. 11


Question Number : 68 Question Id : 7155052718 Question Type : MCQ Option Shuffling : Yes Is

Question Mandatory : No Calculator : None Response Time : N.A Think Time : N.A Minimum

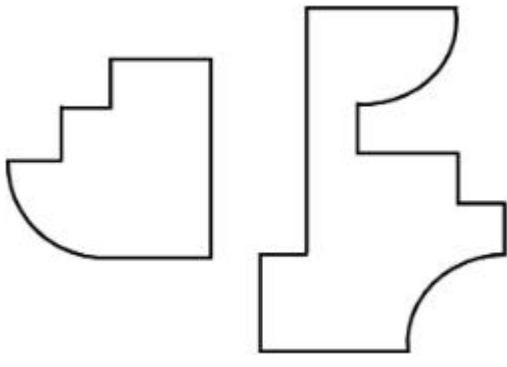
Instruction Time : 0

Correct Marks : 4 Wrong Marks : 1

If the question figure is cut into two parts, which of the answer figures complete the question figure without any overlappings?



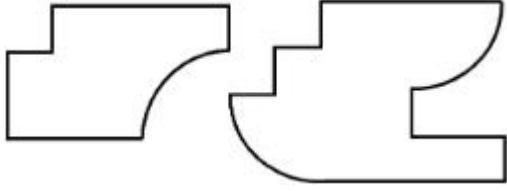
Options :



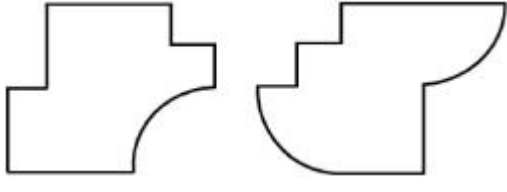
7155058609.



7155058610.



7155058611.




7155058612.

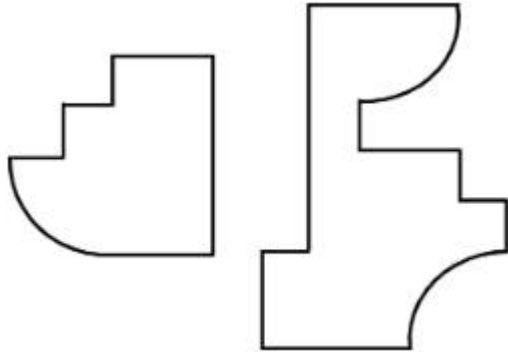
Question Number : 68 Question Id : 7155052718 Question Type : MCQ Option Shuffling : Yes Is Question Mandatory : No Calculator : None Response Time : N.A Think Time : N.A Minimum Instruction Time : 0

Correct Marks : 4 Wrong Marks : 1


જો પ્રશ્ન આકૃતિ બે ભાગમાં કાપવામાં આવે તો ક્યાં જવાબની આકૃતિ કોઈ પણ આરજાદન (ઓવરલેપિંગ્સ) વિના પ્રશ્ન આકૃતિને પૂર્ણ કરે છે,



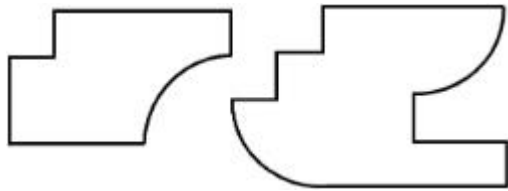
Options :



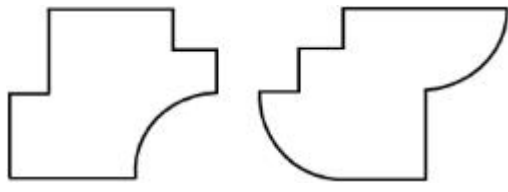
7155058609.



7155058610.



7155058611.

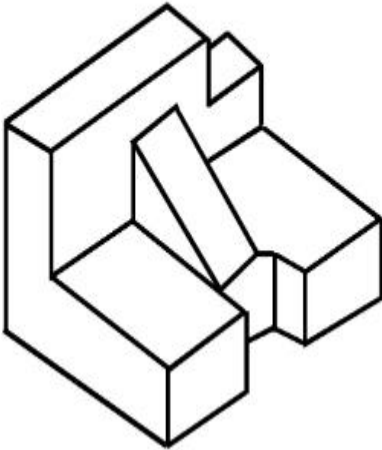


7155058612.

Question Number : 69 Question Id : 7155052719 Question Type : MCQ Option Shuffling : Yes Is Question Mandatory : No Calculator : None Response Time : N.A Think Time : N.A Minimum Instruction Time : 0

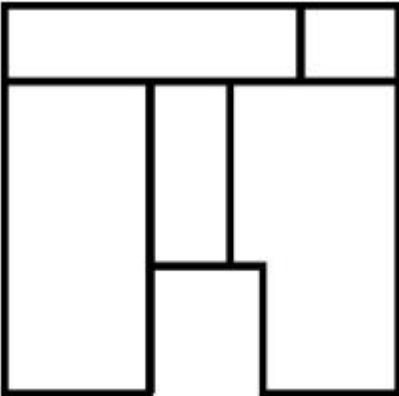
Correct Marks : 4 Wrong Marks : 1

The 3D problem figure shows the view of an object. Identify its appropriate top view from the answer figures.

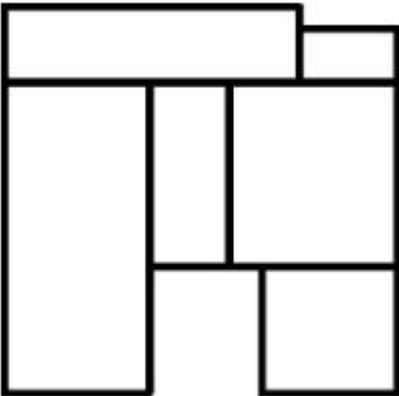


Options :

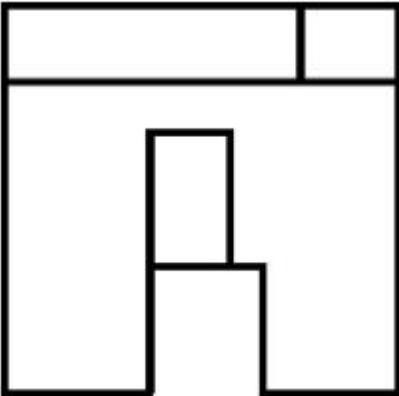
7155058613.



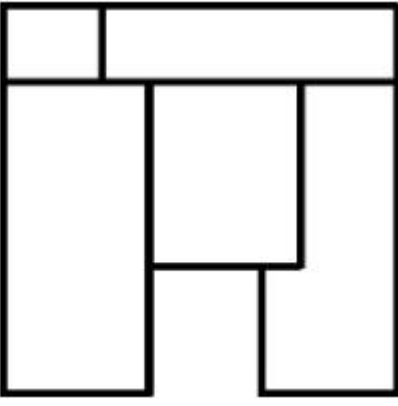
7155058614.



7155058615.



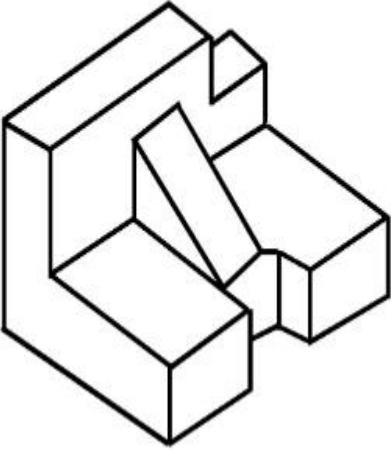
7155058616.



Question Number : 69 Question Id : 7155052719 Question Type : MCQ Option Shuffling : Yes Is Question Mandatory : No Calculator : None Response Time : N.A Think Time : N.A Minimum Instruction Time : 0

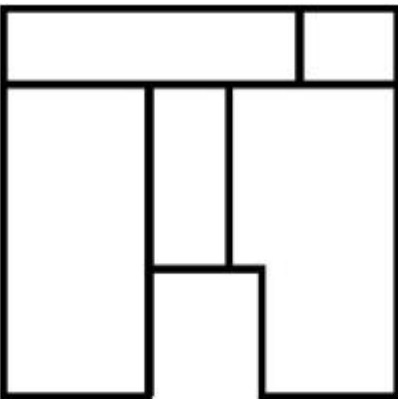
Correct Marks : 4 Wrong Marks : 1

પ્રશ્નમાં આપેલી 3D આકૃતિ એક પદાર્થનો દેખાવ દર્શાવે છે. નીચે આપેલી જવાબ આકૃતિઓ માંથી પદાર્થમાટે યોગ્ય ઉપરની સપાટી ઓળખો.

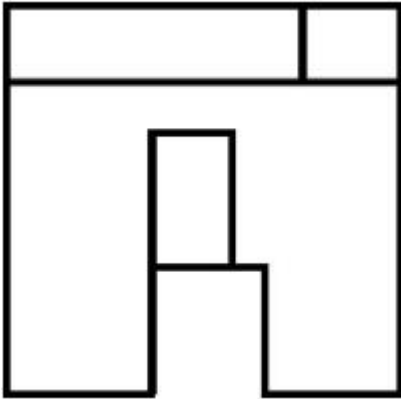
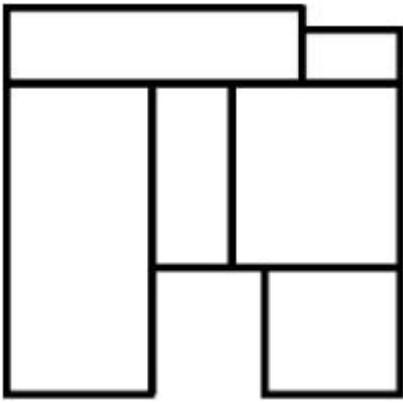


Options :

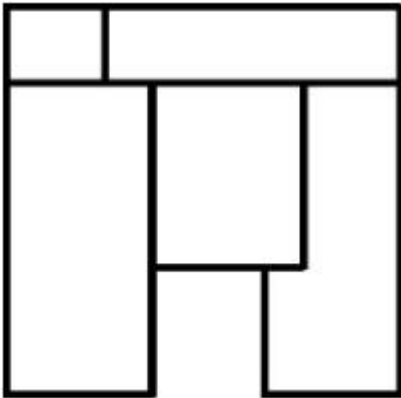
7155058613.



7155058614.



7155058615.

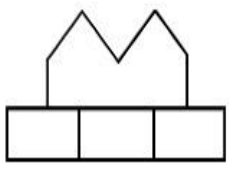
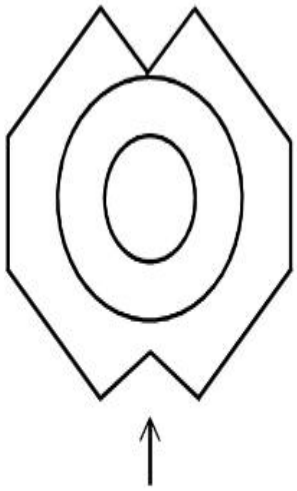


7155058616.

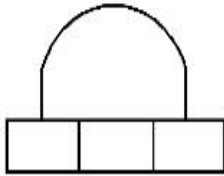
Question Number : 70 Question Id : 7155052720 Question Type : MCQ Option Shuffling : Yes Is
Question Mandatory : No Calculator : None Response Time : N.A Think Time : N.A Minimum
Instruction Time : 0

Correct Marks : 4 Wrong Marks : 1

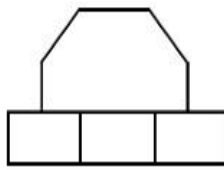
Identify the correct elevation when you look into the object from the marked arrow side of the plan of the object.



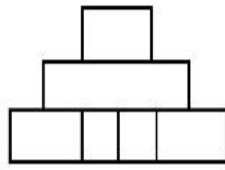
A



B



C



D

Options :

7155058617. D

7155058618. A

7155058619. B

7155058620. C

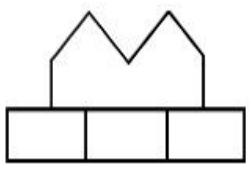

Question Number : 70 Question Id : 7155052720 Question Type : MCQ Option Shuffling : Yes Is

Question Mandatory : No Calculator : None Response Time : N.A Think Time : N.A Minimum

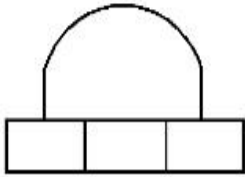
Instruction Time : 0

Correct Marks : 4 Wrong Marks : 1

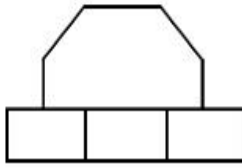
જ્યારે પદાર્થના પ્લાનમાં તેને તીર બાજુએથી જોવા માં આવે ત્યારે તેનો જે દેખાવ હોય તે ઓળખો.



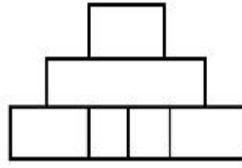
A



B



C



D

Options :

7155058617. D

7155058618. A

7155058619. B

7155058620. C

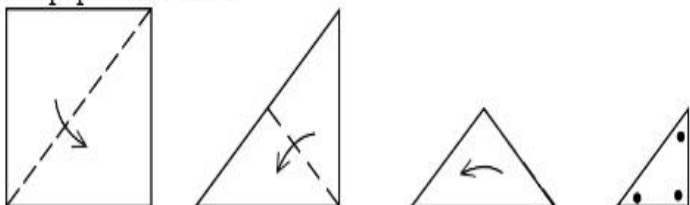
Question Number : 71 Question Id : 7155052721 Question Type : MCQ Option Shuffling : Yes Is

Question Mandatory : No Calculator : None Response Time : N.A Think Time : N.A Minimum

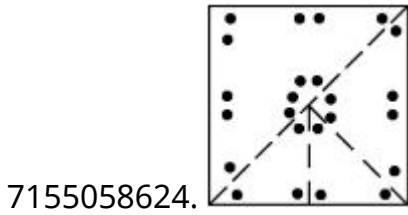
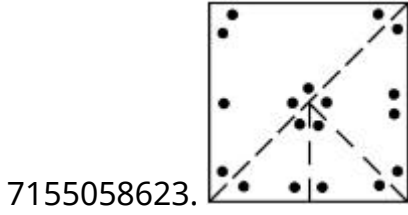
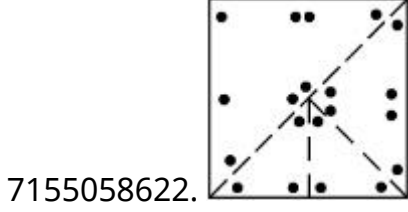
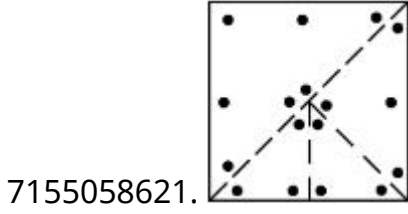
Instruction Time : 0

Correct Marks : 4 Wrong Marks : 1

A paper is folded in a given pattern and it is cut at the end. Identify which pattern is formed when the paper is unfold.



Options :



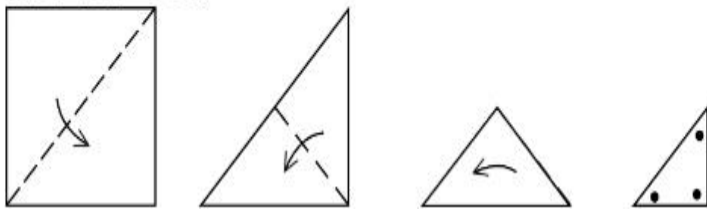
Question Number : 71 Question Id : 7155052721 Question Type : MCQ Option Shuffling : Yes Is

Question Mandatory : No Calculator : None Response Time : N.A Think Time : N.A Minimum

Instruction Time : 0

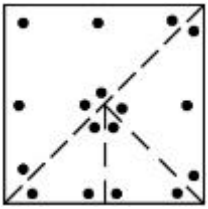
Correct Marks : 4 Wrong Marks : 1

એક કાગળને નીચે આપેલ નમૂના પ્રમાણે વાળવું અને તેને છેડે થી કાપવું એ ભાત ઓળખો જે કાગળને ખોલવાથી બનશે.

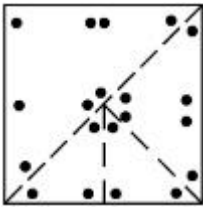


Options :

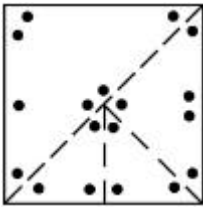
7155058621.



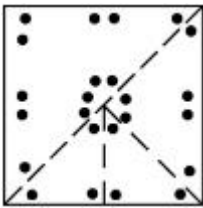
7155058622.



7155058623.



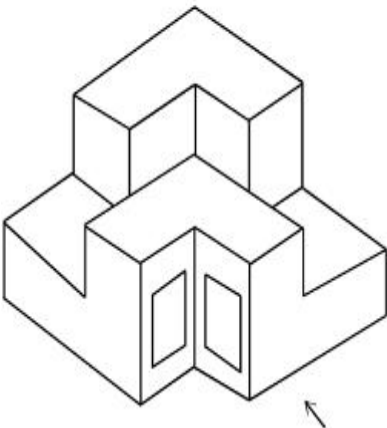
7155058624.



Question Number : 72 Question Id : 7155052722 Question Type : MCQ Option Shuffling : Yes Is Question Mandatory : No Calculator : None Response Time : N.A Think Time : N.A Minimum Instruction Time : 0

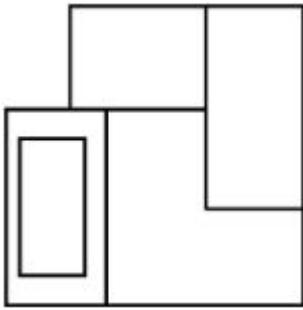
Correct Marks : 4 Wrong Marks : 1

The question figure shows the 3-D view of an object. Identify the correct view, looking in the direction of arrow.

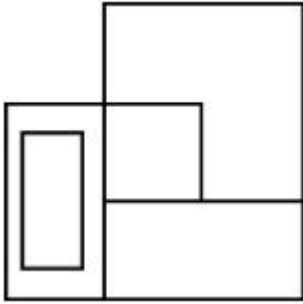


Options :

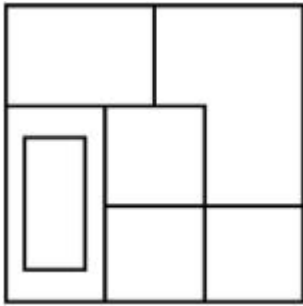
7155058625.



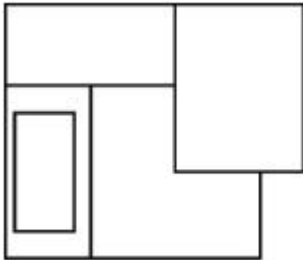
7155058626.



7155058627.



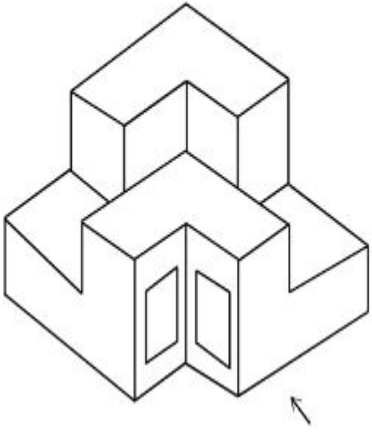
7155058628.



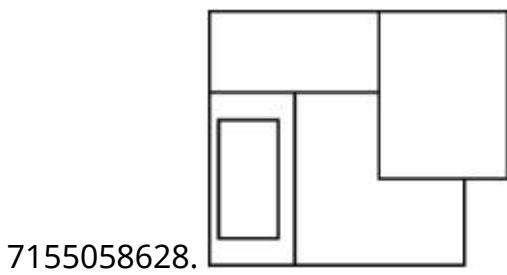
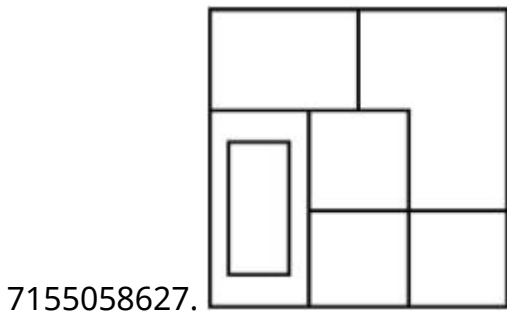
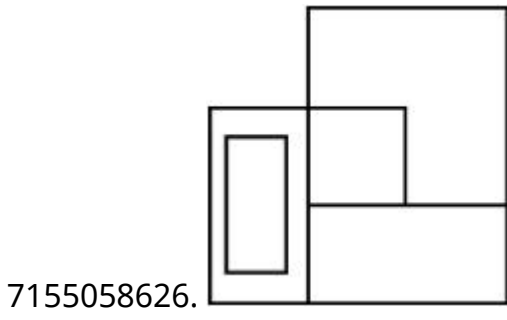
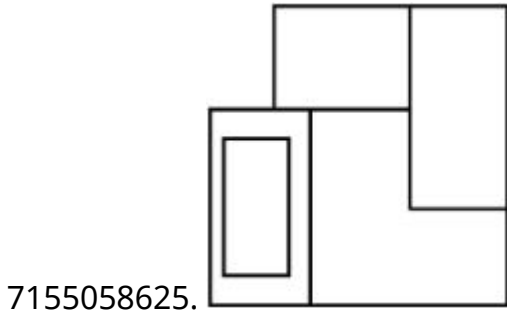
Question Number : 72 Question Id : 7155052722 Question Type : MCQ Option Shuffling : Yes Is Question Mandatory : No Calculator : None Response Time : N.A Think Time : N.A Minimum Instruction Time : 0

Correct Marks : 4 Wrong Marks : 1

પ્રશ્નમાં આપેલી આકૃતિ એક પદાર્થ 3D દેખાવ દર્શાવે છે. ત્રીસની દિશામાં જોતા તેનો સાચો દેખાવ શોધો.



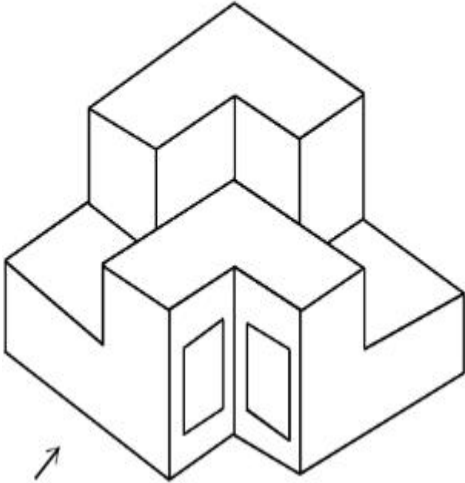
Options :



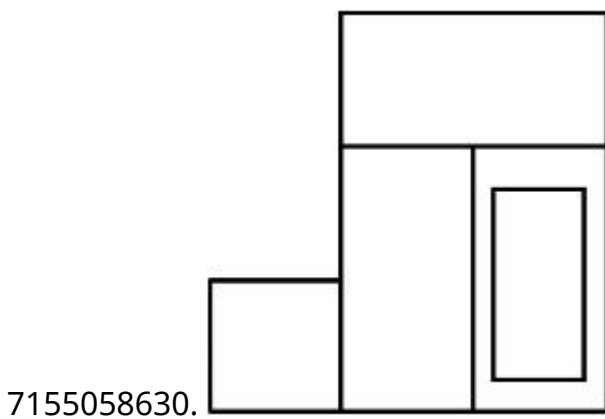
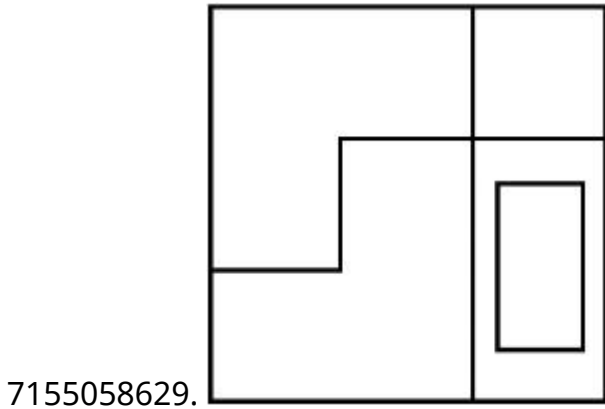
Question Number : 73 Question Id : 7155052723 Question Type : MCQ Option Shuffling : Yes Is Question Mandatory : No Calculator : None Response Time : N.A Think Time : N.A Minimum Instruction Time : 0

Correct Marks : 4 Wrong Marks : 1

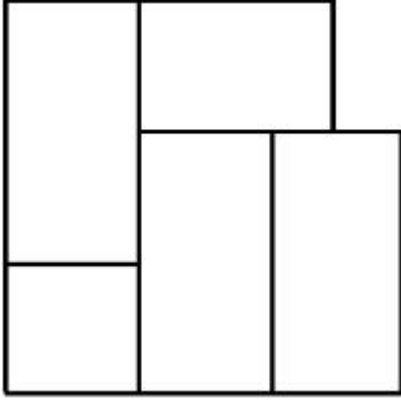
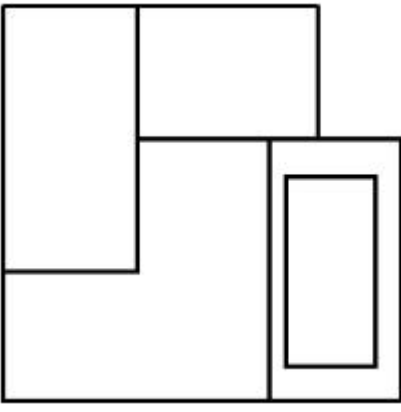
The question figure shows the 3-D view of an object. Identify the correct view, looking in the direction of arrow.



Options :



7155058631.

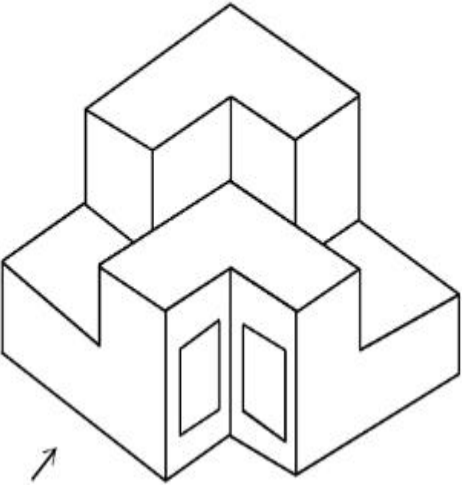


7155058632.

Question Number : 73 Question Id : 7155052723 Question Type : MCQ Option Shuffling : Yes Is Question Mandatory : No Calculator : None Response Time : N.A Think Time : N.A Minimum Instruction Time : 0

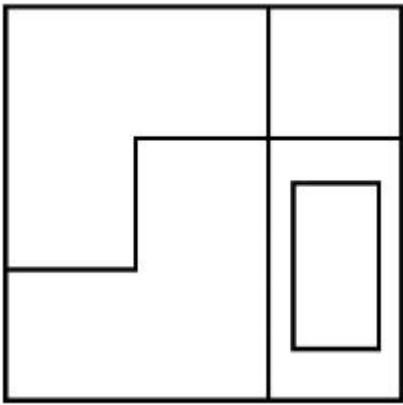
Correct Marks : 4 Wrong Marks : 1

પ્રશ્નમાં આપેલી આકૃતિ એક પદાર્થનો 3D દેખાવ દર્શાવે છે. ત્રીસની દિશામાં જોતા તેનો સાચો દેખાવ શોધો.

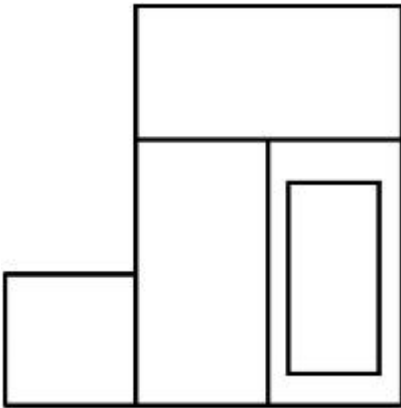


Options :

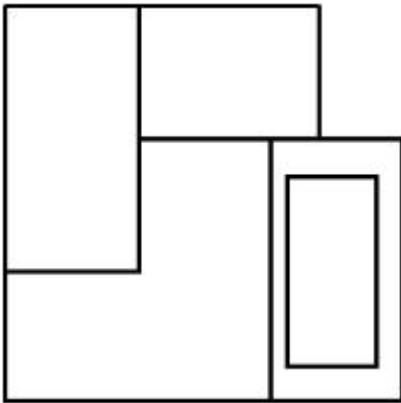
7155058629.



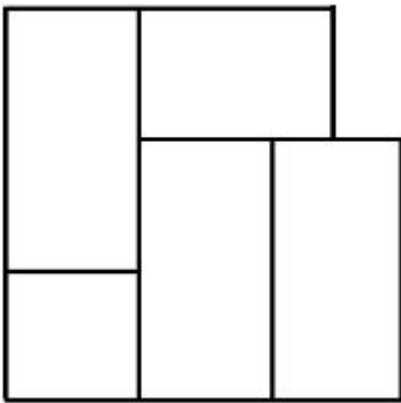
7155058630.



7155058631.



7155058632.

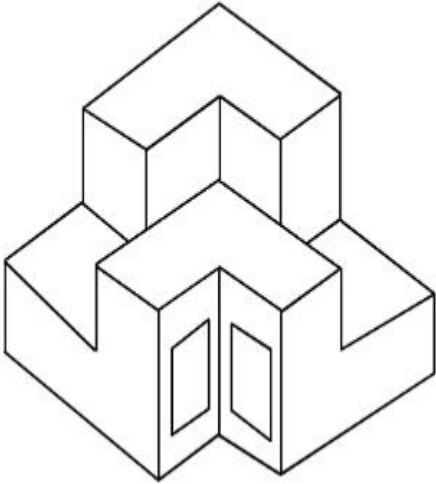


Question Mandatory : No Calculator : None Response Time : N.A Think Time : N.A Minimum

Instruction Time : 0

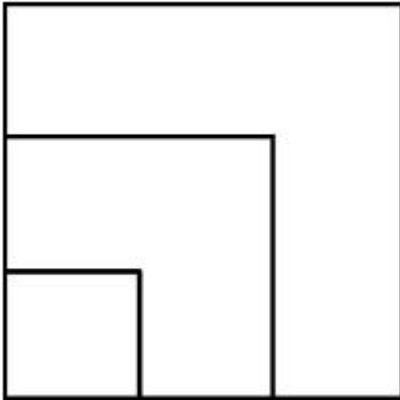
Correct Marks : 4 Wrong Marks : 1

From the given options below, choose the correct plan of the 3-D object, when viewed from the top.

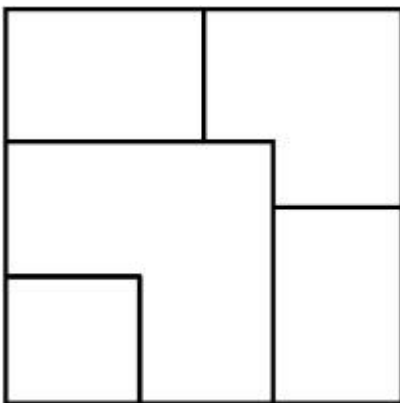


Options :

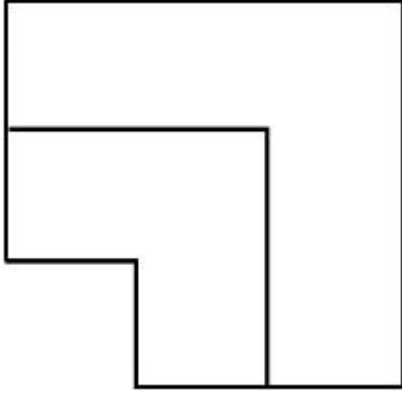
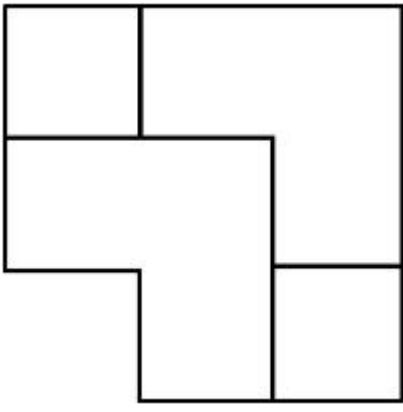
7155058633.



7155058634.



7155058635.

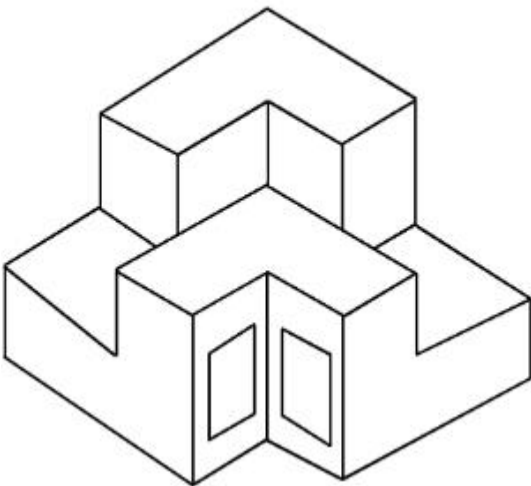


7155058636.

Question Number : 74 Question Id : 7155052724 Question Type : MCQ Option Shuffling : Yes Is Question Mandatory : No Calculator : None Response Time : N.A Think Time : N.A Minimum Instruction Time : 0

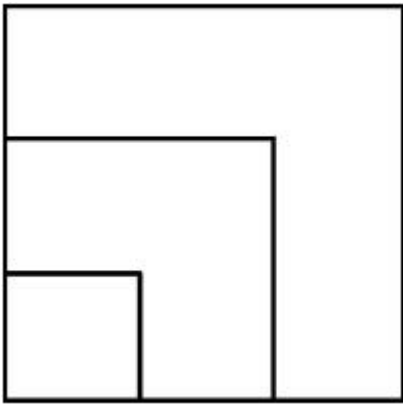
Correct Marks : 4 Wrong Marks : 1

નીચે આપેલા વિકલ્પો માંથી ઉપરની સપાટીથી જોતા 3D પદાર્થનો સાચો નકશો શોધો.

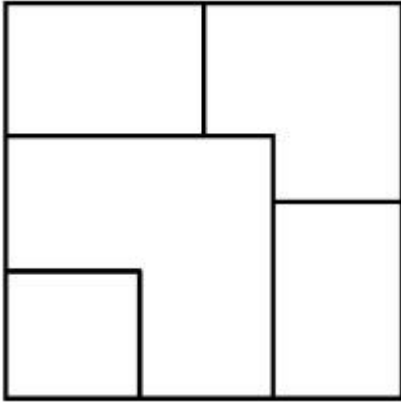


Options :

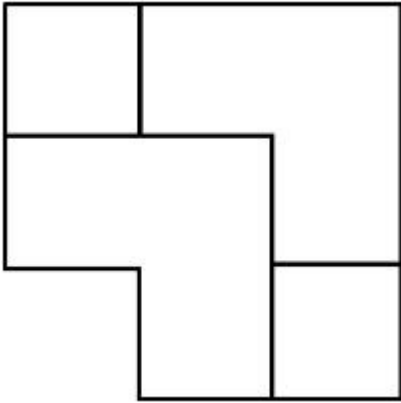
7155058633.



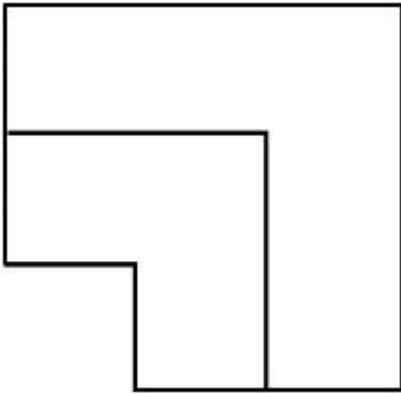
7155058634.



7155058635.



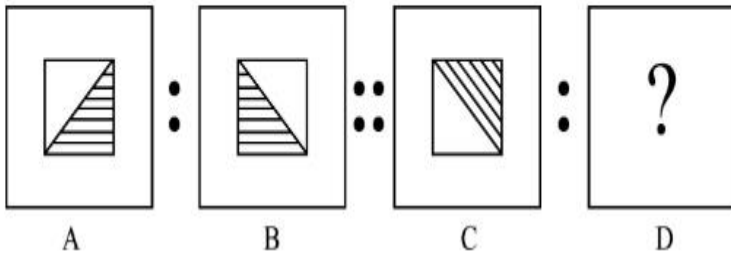
7155058636.



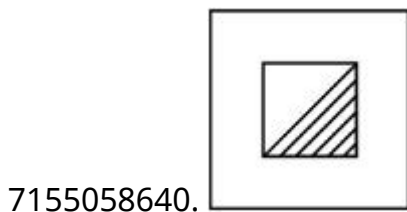
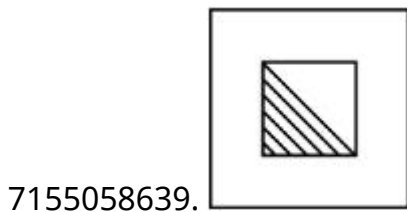
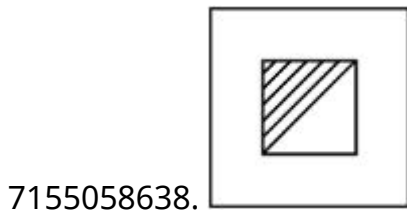
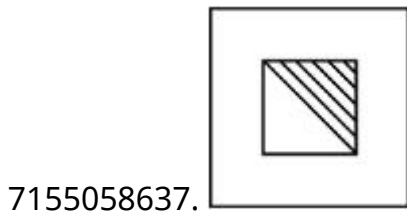
Instruction Time : 0

Correct Marks : 4 Wrong Marks : 1

The second figure in the first part of the problem figures bears certain relationship to the first figure. Similarly, one of the figures of answer figures bears the same relationship to the first figure of the second part. Identify the correct option from the given answer figures.



Options :



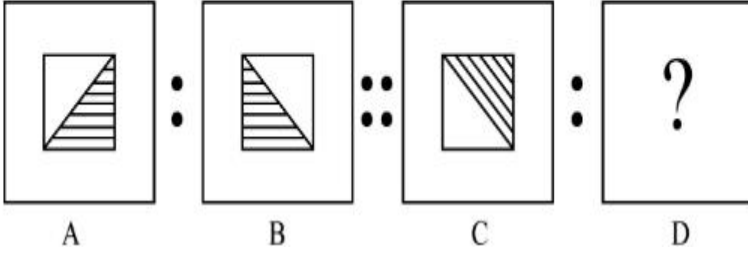
Question Number : 75 Question Id : 7155052725 Question Type : MCQ Option Shuffling : Yes Is

Question Mandatory : No Calculator : None Response Time : N.A Think Time : N.A Minimum

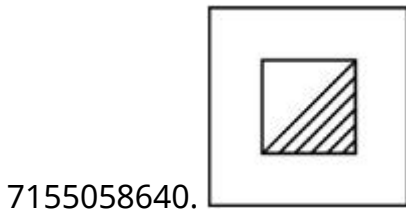
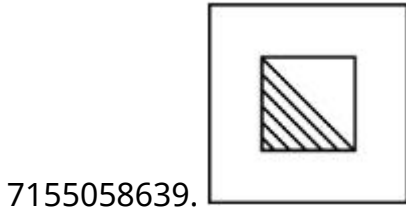
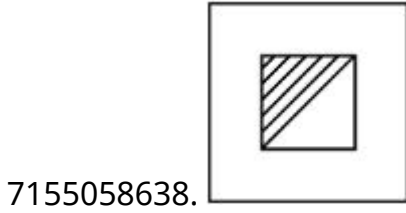
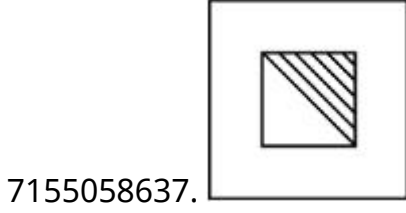
Instruction Time : 0

Correct Marks : 4 Wrong Marks : 1

પ્રશ્ન આકૃતિઓમાંના પ્રથમ ભાગમાં બીજી આકૃતિ પ્રથમ આકૃતિ સાથે ચોક્કસ સંબંધ ધરાવે છે તેવી જ રીતે જવાબની આકૃતિઓ એક આકૃતિ બીજા ભાગના પ્રથમ આકૃતિ સાથે સમાન સંબંધ ધરાવે છે. નીચે આપેલી જવાબની આકૃતિઓ માંથી સાચો વિકલ્પ પસંદ કરો.



Options :



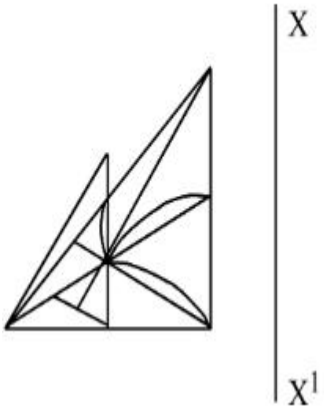
Question Number : 76 Question Id : 7155052726 Question Type : MCQ Option Shuffling : Yes Is

Question Mandatory : No Calculator : None Response Time : N.A Think Time : N.A Minimum

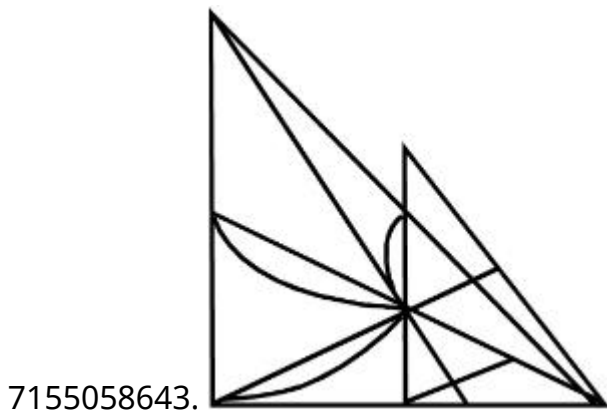
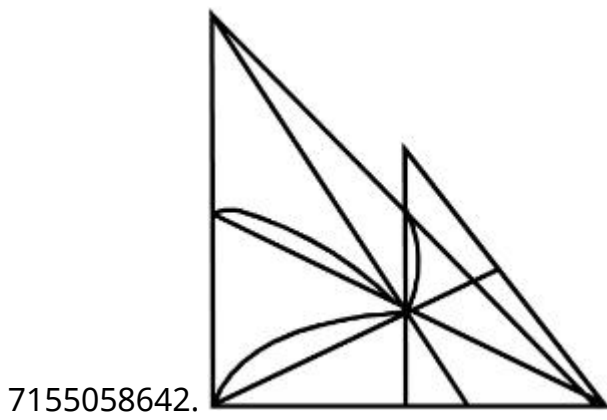
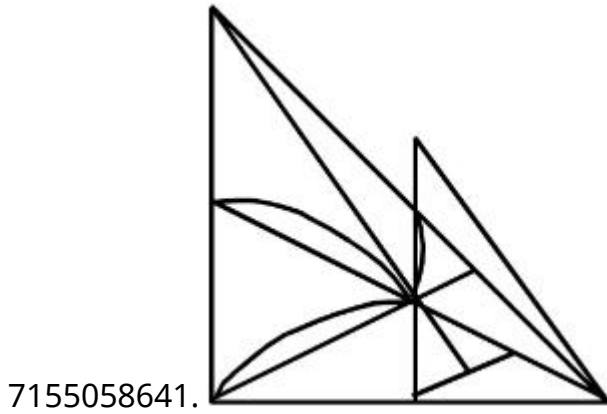
Instruction Time : 0

Correct Marks : 4 Wrong Marks : 1

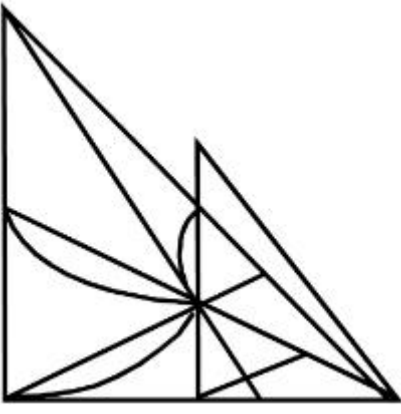
Identify the true mirror image of the figure amongst the answer figures with respect to X-X



Options :



7155058644.



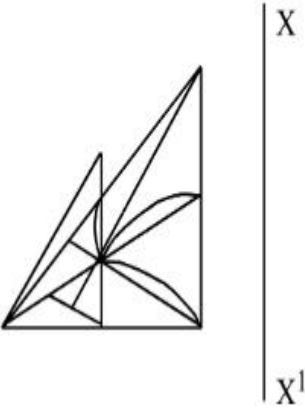
Question Number : 76 Question Id : 7155052726 Question Type : MCQ Option Shuffling : Yes Is

Question Mandatory : No Calculator : None Response Time : N.A Think Time : N.A Minimum

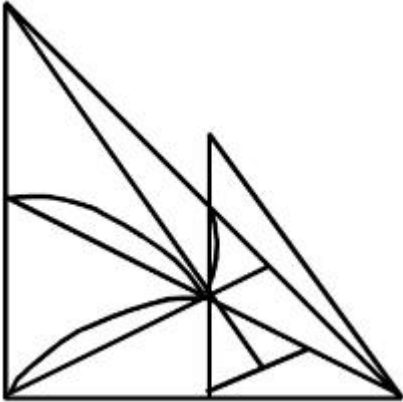
Instruction Time : 0

Correct Marks : 4 Wrong Marks : 1

નીચે આપેલી જવાબોની આકૃતિઓ માંથી X-Xના સંદર્ભમાં પ્રશ્નની આકૃતિની સાચી અરીસાની છબી (આરસી પ્રતિબિંબ) શોધો.

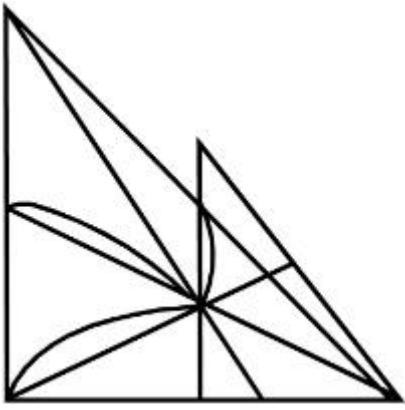


Options :

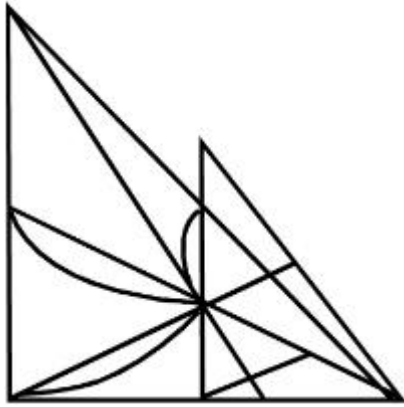


7155058641.

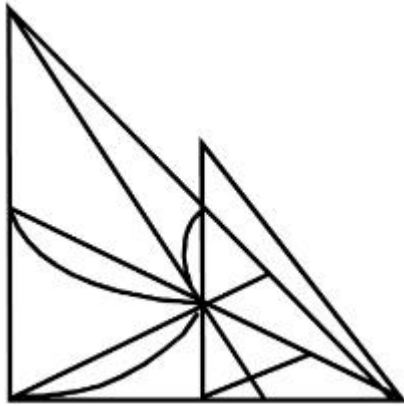
7155058642.



7155058643.



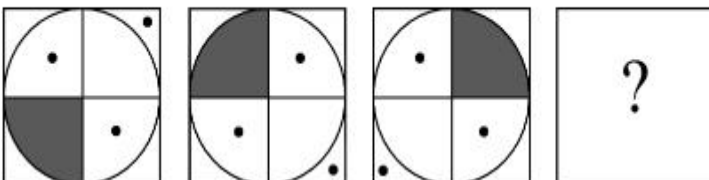
7155058644.



Question Number : 77 Question Id : 7155052727 Question Type : MCQ Option Shuffling : Yes Is Question Mandatory : No Calculator : None Response Time : N.A Think Time : N.A Minimum Instruction Time : 0

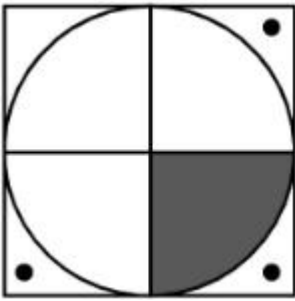
Correct Marks : 4 Wrong Marks : 1

Choose the correct option amongst the answer figures which complete the series.

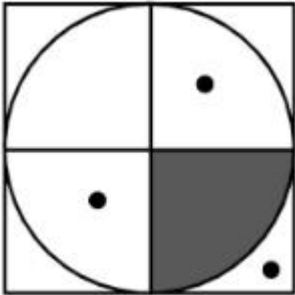


Options :

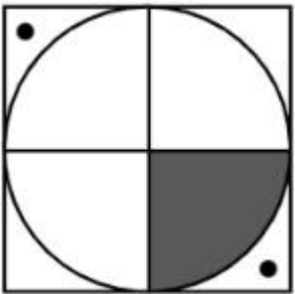
7155058645.



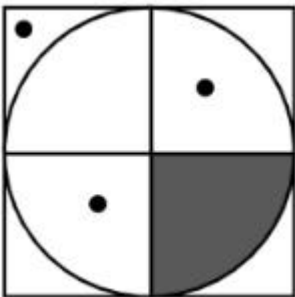
7155058646.



7155058647.



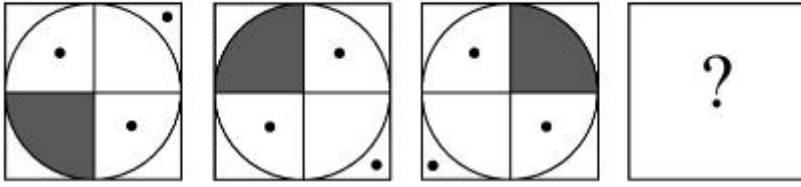
7155058648.



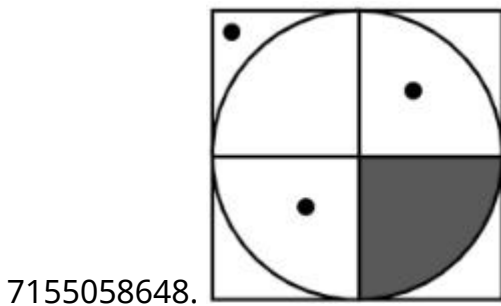
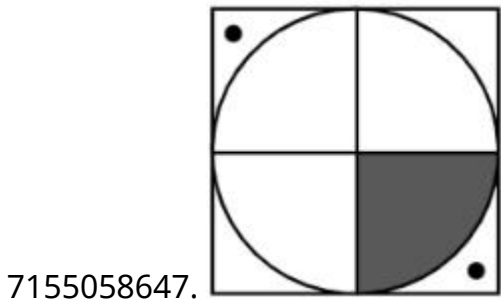
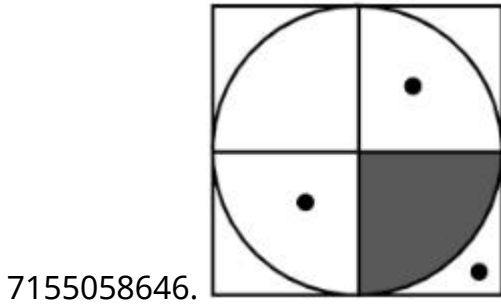
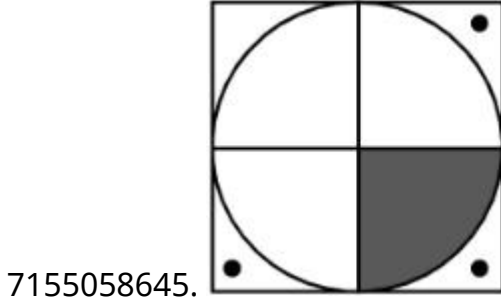
Question Number : 77 Question Id : 7155052727 Question Type : MCQ Option Shuffling : Yes Is Question Mandatory : No Calculator : None Response Time : N.A Think Time : N.A Minimum Instruction Time : 0

Correct Marks : 4 Wrong Marks : 1

નીચે આપેલા જવાબો માંથી શ્રેણી પૂર્ણ કરતો જવાબ શોધો.



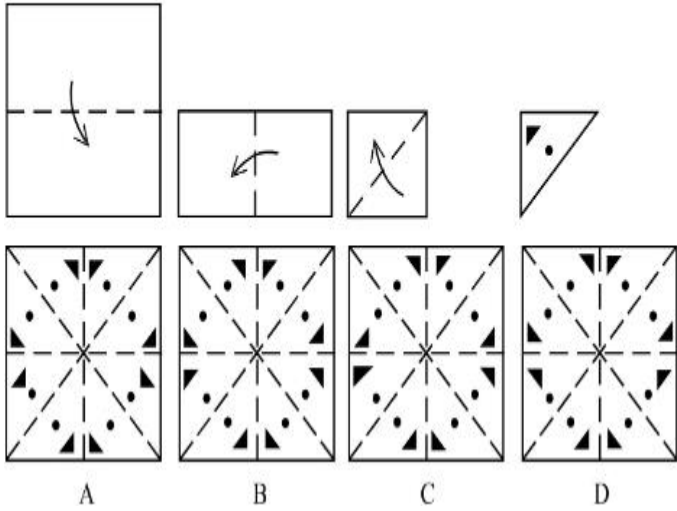
Options :



Instruction Time : 0

Correct Marks : 4 Wrong Marks : 1

Sheet is folded in marked format and cut led at last as shown. Identify from the options below, how the pattern will be made when it's fully unfold?



Options :

7155058649. B

7155058650. A

7155058651. D

7155058652. C

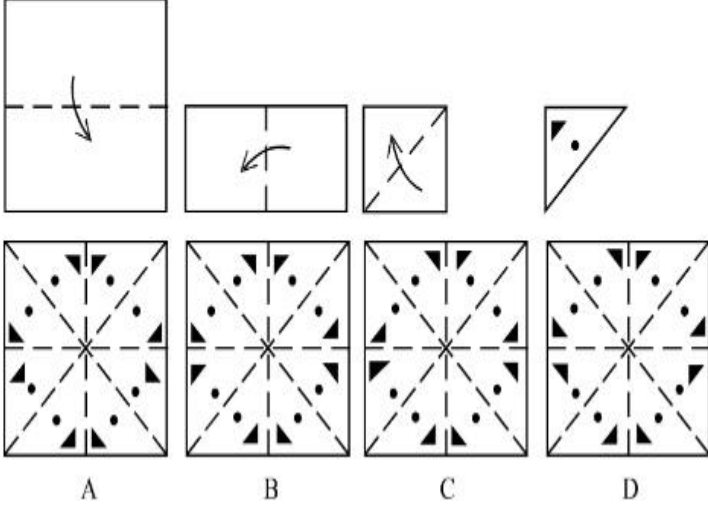
Question Number : 78 Question Id : 7155052728 Question Type : MCQ Option Shuffling : Yes Is

Question Mandatory : No Calculator : None Response Time : N.A Think Time : N.A Minimum

Instruction Time : 0

Correct Marks : 4 Wrong Marks : 1

શીટને ચિહ્નિત ફોર્મેટમાં વાળવામાં આવે છે અને બતાવ્યાં પ્રમાણે છેલ્લે દોરી કાપવામાં આવે છે. નીચે આપેલા વિકલ્પો માંથી ઓળખો, જ્યારે તેની સ્પીરીલ (Spereel) ભાત (પેટર્ન) કેવી રીકે બનશે ?



Options :

7155058649. B

7155058650. A

7155058651. D

7155058652. C

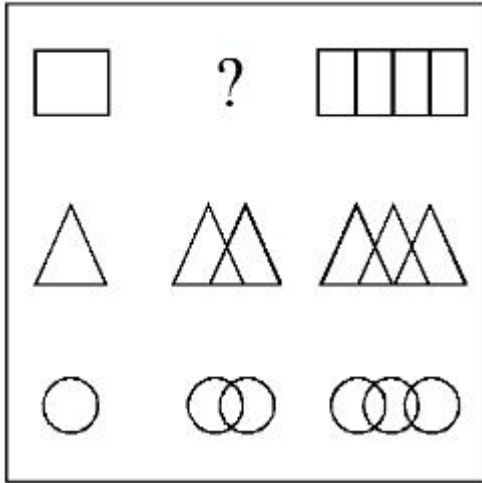
Question Number : 79 Question Id : 7155052729 Question Type : MCQ Option Shuffling : Yes Is

Question Mandatory : No Calculator : None Response Time : N.A Think Time : N.A Minimum

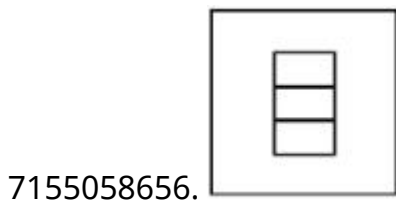
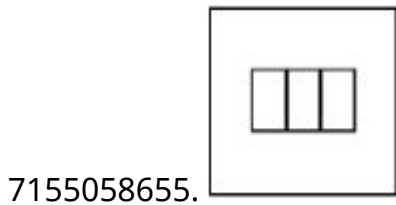
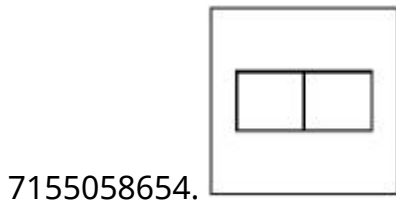
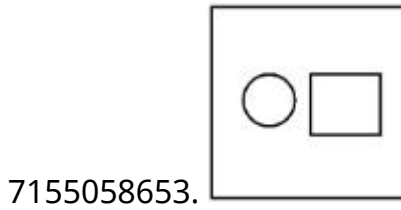
Instruction Time : 0

Correct Marks : 4 Wrong Marks : 1

In the figure mentioned below find the missing series:-

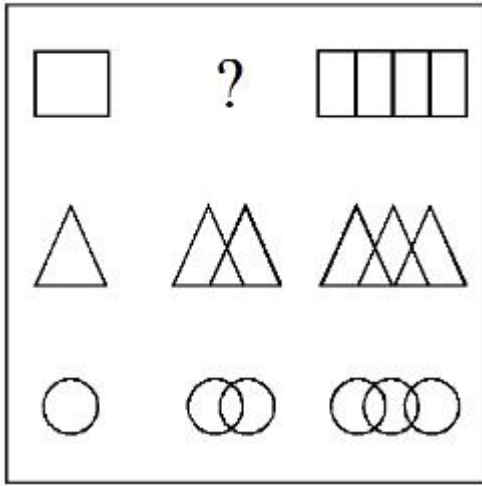


Options :

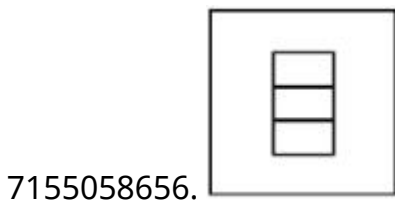
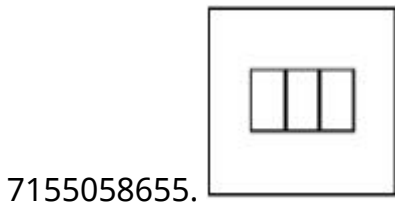
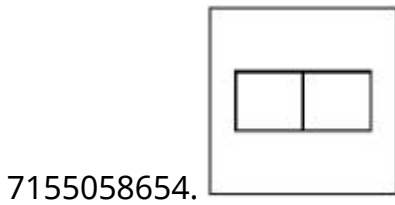
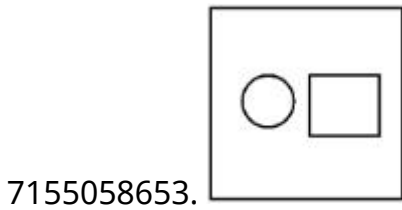


Question Number : 79 Question Id : 7155052729 Question Type : MCQ Option Shuffling : Yes Is Question Mandatory : No Calculator : None Response Time : N.A Think Time : N.A Minimum Instruction Time : 0 Correct Marks : 4 Wrong Marks : 1

નીચે આપેલી આકૃતિ માંથી ખૂટતી (ગેરહાજર) શ્રેણી શોધો.

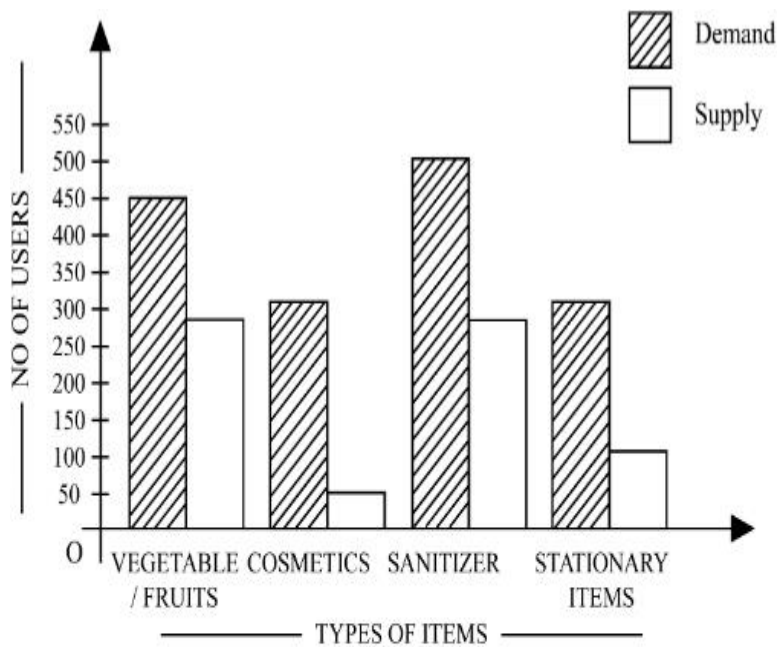


Options :



Question Number : 80 Question Id : 7155052730 Question Type : MCQ Option Shuffling : Yes Is Question Mandatory : No Calculator : None Response Time : N.A Think Time : N.A Minimum Instruction Time : 0

Correct Marks : 4 Wrong Marks : 1



The diagram shows the supply and demand of different users for different items. Which of the following is/are correct?

- A. Sanitizer only meet 50% of the demand
- B. Cosmetics has the least supply among all.
- C. Among all, two items have equal demand but difference in supply
- D. Among all, two items have equal supply and two items have equal demand.

Choose the correct answer from the options given below:-

Options :

7155058657. B and D only

7155058658. A and B only

7155058659. A and C only

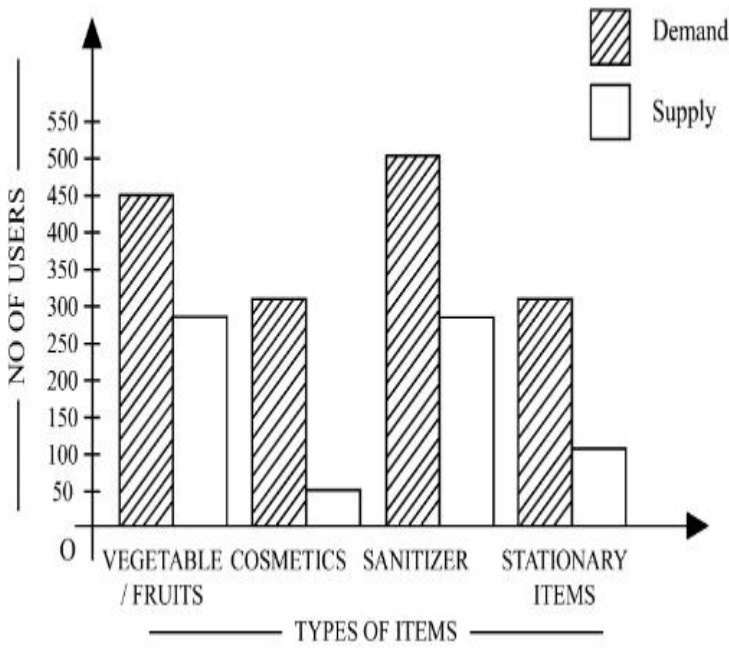
7155058660. B, C and D only

Question Number : 80 Question Id : 7155052730 Question Type : MCQ Option Shuffling : Yes Is

Question Mandatory : No Calculator : None Response Time : N.A Think Time : N.A Minimum

Instruction Time : 0

Correct Marks : 4 Wrong Marks : 1



રેખાકૃતિ વિવિધ વસ્તુઓ માટે વપરાશકર્તાઓની પૂરવઠો અને માંગ દર્શાવે છે. નીચે આપેલા વિકલ્પો માંથી સાચું શોધો.

- સેનિટાઈઝર 50% માંગ પૂરી કરે છે.
- સૌંદર્ય પ્રસાધનોમાં સૌથી ઓછો પુરવઠો હોય છે.
- બધામાં, બે વસ્તુઓની સમાન માંગ છે, પરંતુ પુરવઠામાં તફાવત છે.
- બધામાં બે વસ્તુઓ સમાન પુરવઠો ધરાવે છે પરંતુ માંગમાં તફાવત છે.

નીચે આપેલા વિકલ્પોમાંથી સાચો જવાબ શોધો.

Options :

7155058657. ફક્ત B અને D

7155058658. ફક્ત A અને B

7155058659. ફક્ત A અને C

7155058660. ફક્ત B, C અને D

Planning

Section Number :	4
Section type :	Online
Mandatory or Optional :	Mandatory
Number of Questions :	25
Number of Questions to be attempted :	25
Section Marks :	100
Enable Mark as Answered Mark for Review and Clear Response :	Yes
Maximum Instruction Time :	0
Sub-Section Number :	1
Sub-Section Id :	715505166
Question Shuffling Allowed :	Yes
Is Section Default? :	null

Question Number : 81 Question Id : 7155052731 Question Type : MCQ Option Shuffling : Yes Is Question Mandatory : No Calculator : None Response Time : N.A Think Time : N.A Minimum Instruction Time : 0

Correct Marks : 4 Wrong Marks : 1

When a person cannot meet a minimum level of living standards compared to others in the same time and place, it is called :

Options :

7155058661. Poverty

7155058662. Abundance

7155058663. Adequacy

7155058664. Luxury

Question Number : 81 Question Id : 7155052731 Question Type : MCQ Option Shuffling : Yes Is Question Mandatory : No Calculator : None Response Time : N.A Think Time : N.A Minimum

Instruction Time : 0

Correct Marks : 4 Wrong Marks : 1

જ્યારે વ્યક્તિ એક જ સમયે અને સ્થાને અન્ય લોકોની સરખામણીમાં જીવનધોરણના લઘુત્તમ સ્તરને પૂર્ણ કરી શકતી નથી ત્યારે કહેવાય છે તે.

Options :

7155058661. ગરીબી

7155058662. વિપુલતા

7155058663. પર્યાપ્તતા

7155058664. વૈભવી

Question Number : 82 Question Id : 7155052732 Question Type : MCQ Option Shuffling : Yes Is

Question Mandatory : No Calculator : None Response Time : N.A Think Time : N.A Minimum

Instruction Time : 0

Correct Marks : 4 Wrong Marks : 1

Acropolis in Greece is a/an:

Options :

7155058665. Court

7155058666. Citadel on a High Land

7155058667. Open Air Theatre

7155058668. Great Bath

Question Number : 82 Question Id : 7155052732 Question Type : MCQ Option Shuffling : Yes Is

Question Mandatory : No Calculator : None Response Time : N.A Think Time : N.A Minimum

Instruction Time : 0

Correct Marks : 4 Wrong Marks : 1

ગ્રીસમાં એકોપોવિસ છે તે.

Options :

7155058665. અદાવત

7155058666. ઊંચી જમીન પર કિલ્લો

7155058667. ઓપન એર થિયેટર

7155058668. ગ્રેટબાથ

Question Number : 83 Question Id : 7155052733 Question Type : MCQ Option Shuffling : Yes Is

Question Mandatory : No Calculator : None Response Time : N.A Think Time : N.A Minimum

Instruction Time : 0

Correct Marks : 4 Wrong Marks : 1

In Land-use map, identify the colour code used for recreational uses.

Options :

7155058669. Yellow

7155058670. Green

7155058671. Purple

7155058672. Blue

Question Number : 83 Question Id : 7155052733 Question Type : MCQ Option Shuffling : Yes Is

Question Mandatory : No Calculator : None Response Time : N.A Think Time : N.A Minimum

Instruction Time : 0

Correct Marks : 4 Wrong Marks : 1

ઉપયોગી જમીન નકશામાં, મનોરંજનના ઉપયોગ માટે વપરાતો રંગ સંકેત (કોડ) શોધો.

Options :

7155058669. પીળો

7155058670. લીલો

7155058671. જાંબલી

7155058672. વાદળી

Question Number : 84 Question Id : 7155052734 Question Type : MCQ Option Shuffling : Yes Is

Question Mandatory : No Calculator : None Response Time : N.A Think Time : N.A Minimum

Instruction Time : 0

Correct Marks : 4 Wrong Marks : 1

Statement I : The plan of Delhi city is in the radial form.

Statement II : The plan of Delhi city is in the Grid Iron form.

In the light of the above statements, choose the *correct* answer from the options given below:

Options :

7155058673. Both Statement **I** and Statement **II** are true

7155058674. Both Statement **I** and Statement **II** are false

7155058675. Statement **I** is true but Statement **II** is false

7155058676. Statement **I** is false but Statement **II** is true

Question Number : 84 Question Id : 7155052734 Question Type : MCQ Option Shuffling : Yes Is

Question Mandatory : No Calculator : None Response Time : N.A Think Time : N.A Minimum

Instruction Time : 0

Correct Marks : 4 Wrong Marks : 1

નીચે બે વિધાનો આપેલા છે.

વિધાન I : દિલ્હી શહેરનું યોજના રેડિયલ (ત્રિજય) સ્વરૂપમાં છે.

વિધાન II : દિલ્હી શહેરનું યોજના ગ્રીડ આર્યન સ્વરૂપમાં છે.

ઉપરના વિધાનોના સંદર્ભમાં, નીચે આપેલા વિકલ્પોમાંથી સાચો જવાબ પસંદ કરો.

Options :

7155058673. બંને વિધાન I અને વિધાન II સાચા છે.

7155058674. બંને વિધાન I અને વિધાન II ખોટા છે.

7155058675. વિધાન I સાચું છે પણ વિધાન II ખોટું છે.

7155058676. વિધાન I ખોટું છે પણ વિધાન II સાચું છે.

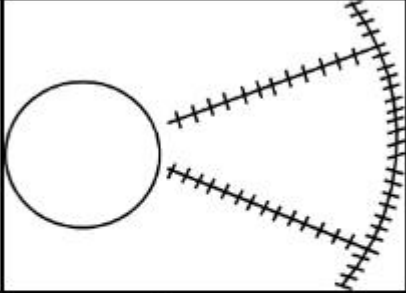
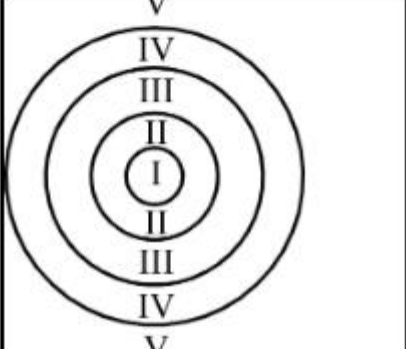
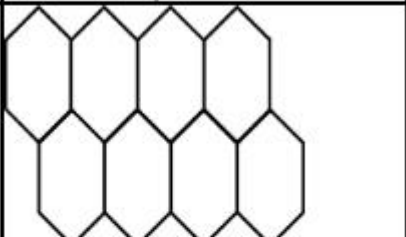
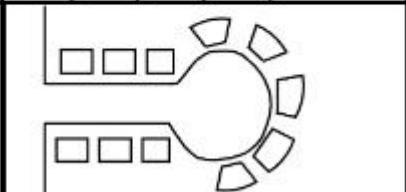
Question Number : 85 Question Id : 7155052735 Question Type : MCQ Option Shuffling : Yes Is

Question Mandatory : No Calculator : None Response Time : N.A Think Time : N.A Minimum

Instruction Time : 0

Correct Marks : 4 Wrong Marks : 1

Match List I with List II

LIST I		LIST II	
A.		I.	Christaller's concept
B.		II.	Garden City concept
C.		III.	Ernest Burgess
D.		IV.	Radburn concept

Choose the correct answer from the options given below:

Options :

7155058677. A-II, B-III, C-I, D-IV

7155058678. A-III, B-I, C-II, D-IV

7155058679. A-IV, B-III, C-I, D-II

7155058680. A-II, B-III, C-IV, D-I

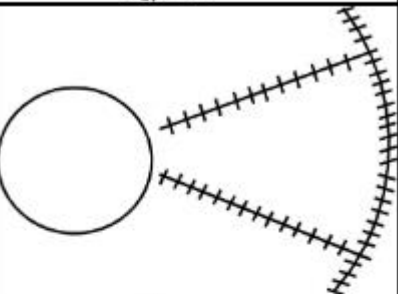
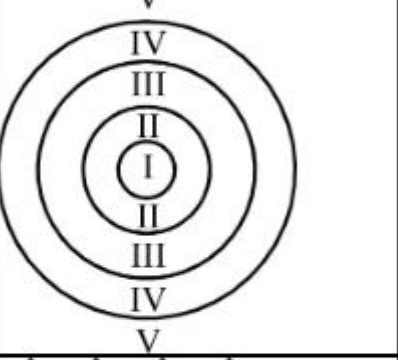
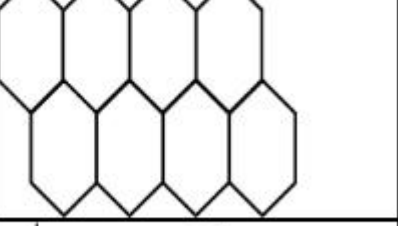
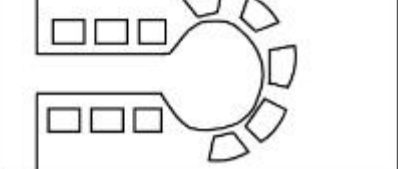
Question Number : 85 Question Id : 7155052735 Question Type : MCQ Option Shuffling : Yes Is

Question Mandatory : No Calculator : None Response Time : N.A Think Time : N.A Minimum

Instruction Time : 0

Correct Marks : 4 Wrong Marks : 1

સૂચિ I સાથે સૂચિ II ને જોડો.

	સૂચિ I	સૂચિ II
A.		I. Christaller's concept
B.		II. Garden City concept
C.		III. Ernest Burgess
D.		IV. Radburn concept

નીચે આપેલા વિકલ્પોમાંથી સાચો જવાબ પસંદ કરો.

Options :

7155058677. A-II, B-III, C-I, D-IV

7155058678. A-III, B-I, C-II, D-IV

7155058679. A-IV, B-III, C-I, D-II

7155058680. A-II, B-III, C-IV, D-I

Question Number : 86 Question Id : 7155052736 Question Type : MCQ Option Shuffling : Yes Is
Question Mandatory : No Calculator : None Response Time : N.A Think Time : N.A Minimum
Instruction Time : 0

Correct Marks : 4 Wrong Marks : 1

Match List I with List II

LIST I		LIST II	
A.	Tower in the Park	I.	Sir Ebenezer Howards
B.	Neighbourhood Unit	II.	Le-Corbusier
C.	Garden City	III.	Clerence Perry
D.	Sector Model	IV.	Homer Hoyt

Choose the correct answer from the options given below:

Options :

7155058681. A-I, B-III, C-IV, D-II

7155058682. A-II, B-III, C-I, D-IV

7155058683. A-II, B-III, C-IV, D-I

7155058684. A-III, B-II, C-I, D-IV

Question Number : 86 Question Id : 7155052736 Question Type : MCQ Option Shuffling : Yes Is
Question Mandatory : No Calculator : None Response Time : N.A Think Time : N.A Minimum
Instruction Time : 0

Correct Marks : 4 Wrong Marks : 1

સૂચિ I સાથે સૂચિ II ને જોડો.

સૂચિ I		સૂચિ II	
A.	પાર્કમાં ટાવર (Tower in Park)	I.	Sir Ebenezer Howards
B.	પડોશી યુનિટ (Neighbourhood Unit)	II.	Le-Corbusier
C.	ગાર્ડન શહેર (Garden City)	III.	Clerence Perry
D.	સેક્ટર મોડલ (Sector Model)	IV.	Homes Hoyt's

નીચે આપેલા વિકલ્પોમાંથી સાચો જવાબ પસંદ કરો.

Options :

7155058681. A-I, B-III, C-IV, D-II

7155058682. A-II, B-III, C-I, D-IV

7155058683. A-II, B-III, C-IV, D-I

7155058684. A-III, B-II, C-I, D-IV

Question Number : 87 Question Id : 7155052737 Question Type : MCQ Option Shuffling : Yes Is Question Mandatory : No Calculator : None Response Time : N.A Think Time : N.A Minimum Instruction Time : 0

Correct Marks : 4 Wrong Marks : 1

Match List I with List II

LIST I		LIST II	
A.	1st Five Year Plan	I.	1969-1974
B.	4th Five Year Plan	II.	1951-1956
C.	8th Five Year Plan	III.	1992-1997
D.	11th Five Year Plan	IV.	2007-2012

Choose the correct answer from the options given below:

Options :

7155058685. A-I, B-II, C-III, D-IV

7155058686. A-II, B-I, C-III, D-IV

7155058687. A-II, B-III, C-IV, D-I

7155058688. A-II, B-I, C-IV, D-III

Question Number : 87 Question Id : 7155052737 Question Type : MCQ Option Shuffling : Yes Is Question Mandatory : No Calculator : None Response Time : N.A Think Time : N.A Minimum Instruction Time : 0

Correct Marks : 4 Wrong Marks : 1

સૂચિ I સાથે સૂચિ II ને જોડો.

સૂચિ I		સૂચિ II	
A.	1 st પંચવર્ષીય યોજના	I.	1969-1974
B.	4 th પંચવર્ષીય યોજના	II.	1951-1956
C.	8 th પંચવર્ષીય યોજના	III.	1992-1997
D.	11 th પંચવર્ષીય યોજના	IV.	2007-2012

નીચે આપેલા વિકલ્પોમાંથી સાચો જવાબ પસંદ કરો.

Options :

7155058685. A-I, B-II, C-III, D-IV

7155058686. A-II, B-I, C-III, D-IV

7155058687. A-II, B-III, C-IV, D-I

7155058688. A-II, B-I, C-IV, D-III

Question Number : 88 Question Id : 7155052738 Question Type : MCQ Option Shuffling : Yes Is

Question Mandatory : No Calculator : None Response Time : N.A Think Time : N.A Minimum

Instruction Time : 0

Correct Marks : 4 Wrong Marks : 1

Match List I with List II

LIST I		LIST II	
A.	Madurai	I.	Planned Hill city
B.	Aurovile	II.	Kadamba Vanam
C.	Lavasa	III.	Grid Iron
D.	Chandigarh	IV.	Matri Mandir

Choose the correct answer from the options given below:

Options :

7155058689. A-IV, B-I, C-II, D-III

7155058690. A-IV, B-II, C-I, D-III

7155058691. A-I, B-II, C-IV, D-III

7155058692. A-II, B-IV, C-I, D-III

Question Number : 88 Question Id : 7155052738 Question Type : MCQ Option Shuffling : Yes Is

Question Mandatory : No Calculator : None Response Time : N.A Think Time : N.A Minimum

Instruction Time : 0

Correct Marks : 4 Wrong Marks : 1

સૂચિ I સાથે સૂચિ II ને જોડો.

સૂચિ I		સૂચિ II	
A.	મદુરાઈ	I.	Planned Hill city
B.	ઓરોવિલ	II.	Kadamba Vanam
C.	લવાસા	III.	Grid Iron
D.	ચંદ્રીગઢ	IV.	Matri Mandir

નીચે આપેલા વિકલ્પોમાંથી સાચો જવાબ પસંદ કરો.

Options :

7155058689. A-IV, B-I, C-II, D-III

7155058690. A-IV, B-II, C-I, D-III

7155058691. A-I, B-II, C-IV, D-III

7155058692. A-II, B-IV, C-I, D-III

Question Number : 89 Question Id : 7155052739 Question Type : MCQ Option Shuffling : Yes Is

Question Mandatory : No Calculator : None Response Time : N.A Think Time : N.A Minimum

Instruction Time : 0

Correct Marks : 4 Wrong Marks : 1

Which of the following article is related to Panchayati Raj ?

Options :

7155058693. Article 243

7155058694. Article 324

7155058695. Article 124

7155058696. Article 73

Question Number : 89 Question Id : 7155052739 Question Type : MCQ Option Shuffling : Yes Is Question Mandatory : No Calculator : None Response Time : N.A Think Time : N.A Minimum Instruction Time : 0

Correct Marks : 4 Wrong Marks : 1

નીચે આપેલામાંથી કઈ અનુચ્છેદ પંચાયતી રાજ ને સંબંધિત છે ?

Options :

7155058693. અનુચ્છેદ 243

7155058694. અનુચ્છેદ 324

7155058695. અનુચ્છેદ 124

7155058696. અનુચ્છેદ 73

Question Number : 90 Question Id : 7155052740 Question Type : MCQ Option Shuffling : Yes Is Question Mandatory : No Calculator : None Response Time : N.A Think Time : N.A Minimum Instruction Time : 0

Correct Marks : 4 Wrong Marks : 1

How many acres is 1 hectare?

Options :

7155058697. 2.47

7155058698. 3.47

7155058699. 4.47

7155058700. 5.47

Question Number : 90 Question Id : 7155052740 Question Type : MCQ Option Shuffling : Yes Is Question Mandatory : No Calculator : None Response Time : N.A Think Time : N.A Minimum Instruction Time : 0

Correct Marks : 4 Wrong Marks : 1

1 હેક્ટર કેટલા એકર છે ?

Options :

7155058697. 2.47

7155058698. 3.47

7155058699. 4.47

7155058700. 5.47

Question Number : 91 Question Id : 7155052741 Question Type : MCQ Option Shuffling : Yes Is Question Mandatory : No Calculator : None Response Time : N.A Think Time : N.A Minimum Instruction Time : 0

Correct Marks : 4 Wrong Marks : 1

What is the full form of the NITI ?

Options :

7155058701. National Institute for Transforming India

7155058702. National Industry for Technology India

7155058703. National Industry for Transforming India

7155058704. National Industrial Technical Institute

Question Number : 91 Question Id : 7155052741 Question Type : MCQ Option Shuffling : Yes Is

Question Mandatory : No Calculator : None Response Time : N.A Think Time : N.A Minimum

Instruction Time : 0

Correct Marks : 4 Wrong Marks : 1

NITIનું આબુ (પૂર્ણ) સ્વરૂપ શું છે ?

Options :

7155058701. National Institute for Transforming India

7155058702. National Industry for Technology India

7155058703. National Industry for Transforming India

7155058704. National Industrial Technical Institute

Question Number : 92 Question Id : 7155052742 Question Type : MCQ Option Shuffling : Yes Is

Question Mandatory : No Calculator : None Response Time : N.A Think Time : N.A Minimum

Instruction Time : 0

Correct Marks : 4 Wrong Marks : 1

The term "Conurbation" was coined by ?

Options :

7155058705. Kevin Lynch

7155058706. Patrick Geddes

7155058707. Ebenezer Howard

7155058708. Lewis Mumford

Question Number : 92 Question Id : 7155052742 Question Type : MCQ Option Shuffling : Yes Is Question Mandatory : No Calculator : None Response Time : N.A Think Time : N.A Minimum Instruction Time : 0

Correct Marks : 4 Wrong Marks : 1

"Conurbation" શબ્દ કોના દ્વારા બનાવવામાં આવ્યો હતો ?

Options :

7155058705. Kevin Lynch

7155058706. Patrick Geddes

7155058707. Ebenezer Howard

7155058708. Lewis Mumford

Question Number : 93 Question Id : 7155052743 Question Type : MCQ Option Shuffling : Yes Is Question Mandatory : No Calculator : None Response Time : N.A Think Time : N.A Minimum Instruction Time : 0

Correct Marks : 4 Wrong Marks : 1

Who is the planner of Durgapur city?

Options :

7155058709. Le Corbusier

7155058710. Ebenezer Howard

7155058711. Joseph Allen Stein

7155058712. Charles Correa

Question Number : 93 Question Id : 7155052743 Question Type : MCQ Option Shuffling : Yes Is
Question Mandatory : No Calculator : None Response Time : N.A Think Time : N.A Minimum
Instruction Time : 0

Correct Marks : 4 Wrong Marks : 1

દુર્ગાપુર શહેરના આયોજક કોણ છે ?

Options :

7155058709. Le Corbusier

7155058710. Ebenezer Howard

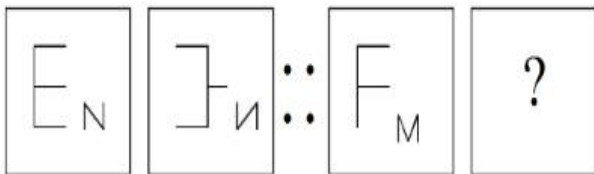
7155058711. Joseph Allen Stein

7155058712. Charles Correa

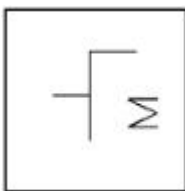
Question Number : 94 Question Id : 7155052744 Question Type : MCQ Option Shuffling : Yes Is
Question Mandatory : No Calculator : None Response Time : N.A Think Time : N.A Minimum
Instruction Time : 0

Correct Marks : 4 Wrong Marks : 1

In problem figures, A and B have certain relation. Identify which one of the answer figures will
have similar relation between C and D?

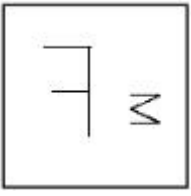


Options :

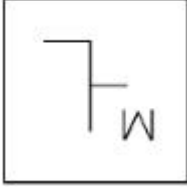


7155058713.

7155058714.



7155058715.



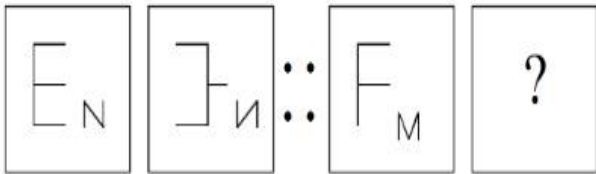
7155058716.



Question Number : 94 Question Id : 7155052744 Question Type : MCQ Option Shuffling : Yes Is Question Mandatory : No Calculator : None Response Time : N.A Think Time : N.A Minimum Instruction Time : 0

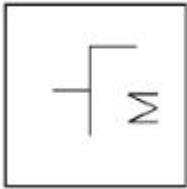
Correct Marks : 4 Wrong Marks : 1

સમસ્યાના આંકડામાં, A અને B ચોક્કસ સંબંધ ધરાવે છે. C અને D વચ્ચે કયા જવાબના આંકડાસમાન સંબંધ ધરાવે છે તે ઓળખો ?

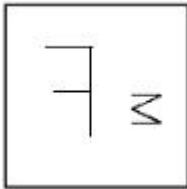


Options :

7155058713.



7155058714.



7155058715.



7155058716.



Question Number : 95 Question Id : 7155052745 Question Type : MCQ Option Shuffling : Yes Is Question Mandatory : No Calculator : None Response Time : N.A Think Time : N.A Minimum Instruction Time : 0

Correct Marks : 4 Wrong Marks : 1

The Housing Development Finance Corporation Limited (HDFC) was founded in:

Options :

7155058717. 1947

7155058718. 1961

7155058719. 1977

7155058720. 1981

Question Number : 95 Question Id : 7155052745 Question Type : MCQ Option Shuffling : Yes Is Question Mandatory : No Calculator : None Response Time : N.A Think Time : N.A Minimum Instruction Time : 0

Correct Marks : 4 Wrong Marks : 1

હાઉસિંગ ડેવલપમેન્ટ ફાઇનાન્સ કોર્પોરેશન લિમિટેડ (HDFC) ની સ્થાપના થઈ હતી તે...

Options :

7155058717. 1947

7155058718. 1961

7155058719. 1977

7155058720. 1981

**Question Number : 96 Question Id : 7155052746 Question Type : MCQ Option Shuffling : Yes Is
Question Mandatory : No Calculator : None Response Time : N.A Think Time : N.A Minimum
Instruction Time : 0**

Correct Marks : 4 Wrong Marks : 1

An essential feature of federal government is:

Options :

7155058721. Centralisation of Powers

7155058722. Division of Powers between various levels

7155058723. Opposition

7155058724. Unwritten Constitution

**Question Number : 96 Question Id : 7155052746 Question Type : MCQ Option Shuffling : Yes Is
Question Mandatory : No Calculator : None Response Time : N.A Think Time : N.A Minimum
Instruction Time : 0**

Correct Marks : 4 Wrong Marks : 1

ફેડરલ સંઘીય સરકારનું એક આવશ્યક લક્ષણ છે.

Options :

7155058721. સત્તાનું કેન્દ્રીકરણ

7155058722. વિવિધ સ્તરો વચ્ચે સત્તાનું વિભાજન

7155058723. વિરોધ

7155058724. અવિખિત બંધારણ

Question Number : 97 Question Id : 7155052747 Question Type : MCQ Option Shuffling : Yes Is

Question Mandatory : No Calculator : None Response Time : N.A Think Time : N.A Minimum

Instruction Time : 0

Correct Marks : 4 Wrong Marks : 1

Which of the following is not a public sector bank?

Options :

7155058725. ICICI

7155058726. State Bank of India

7155058727. Indian Bank

7155058728. Canara Bank

Question Number : 97 Question Id : 7155052747 Question Type : MCQ Option Shuffling : Yes Is

Question Mandatory : No Calculator : None Response Time : N.A Think Time : N.A Minimum

Instruction Time : 0

Correct Marks : 4 Wrong Marks : 1

નીચે આપેલામાંથી કઈ જાહેર ક્ષેત્રની બેંક નથી ?

Options :

7155058725. ICICI

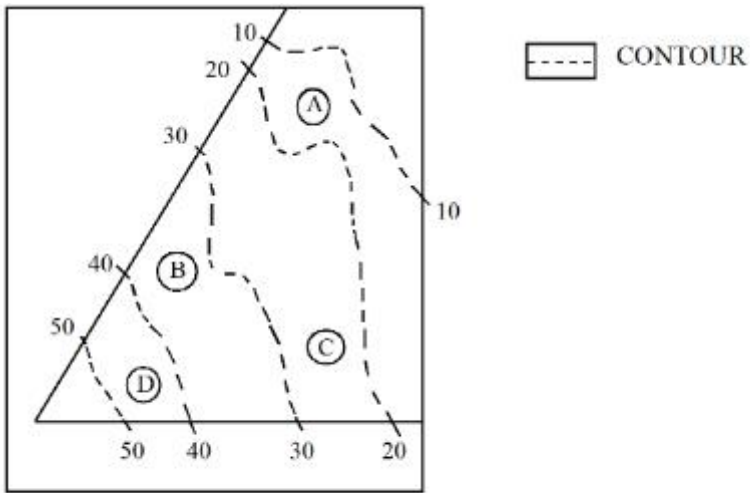
7155058726. સ્ટેટ બેંક ઓફ ઈન્ડિયા

7155058727. ઈન્ડિયન બેંક

7155058728. કેનેરા બેંક

Question Number : 98 Question Id : 7155052748 Question Type : MCQ Option Shuffling : Yes Is Question Mandatory : No Calculator : None Response Time : N.A Think Time : N.A Minimum Instruction Time : 0

Correct Marks : 4 Wrong Marks : 1



In the given diagram, the location of D on the site is:

Options :

7155058729. 30-40

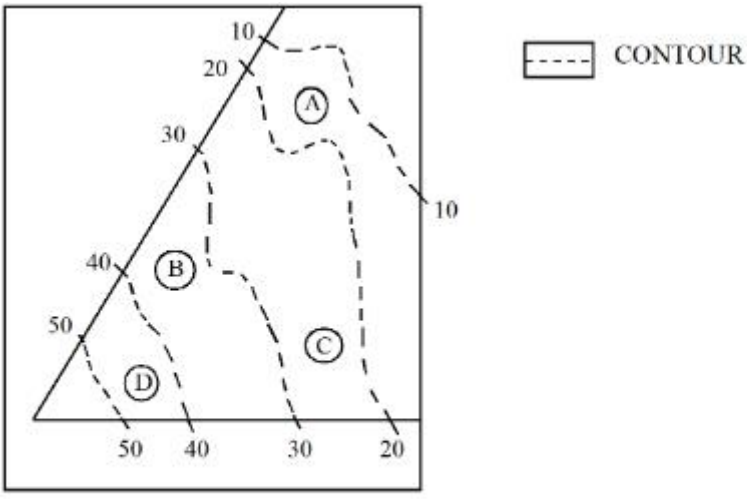
7155058730. 40-50

7155058731. 10-20

7155058732. 20-30

Question Number : 98 Question Id : 7155052748 Question Type : MCQ Option Shuffling : Yes Is Question Mandatory : No Calculator : None Response Time : N.A Think Time : N.A Minimum Instruction Time : 0

Correct Marks : 4 Wrong Marks : 1



આપેલા રેખાકૃતિમાં, સાઈટ (જગ્યા) પર D નું સ્થાન છે તે...

Options :

7155058729. 30-40

7155058730. 40-50

7155058731. 10-20

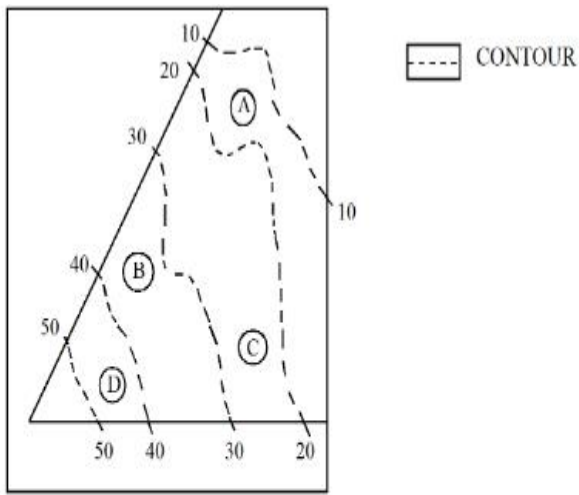
7155058732. 20-30

Question Number : 99 Question Id : 7155052749 Question Type : MCQ Option Shuffling : Yes Is

Question Mandatory : No Calculator : None Response Time : N.A Think Time : N.A Minimum

Instruction Time : 0

Correct Marks : 4 Wrong Marks : 1



Statement I: In the given diagram, the location of B is higher than C

Statement II: In the given diagram, the location of A is lower than C

In the light of the above statements, choose the *correct* answer from the options given below:

Options :

7155058733. Both Statement **I** and Statement **II** are true

7155058734. Both Statement **I** and Statement **II** are false

7155058735. Statement **I** is true but Statement **II** is false

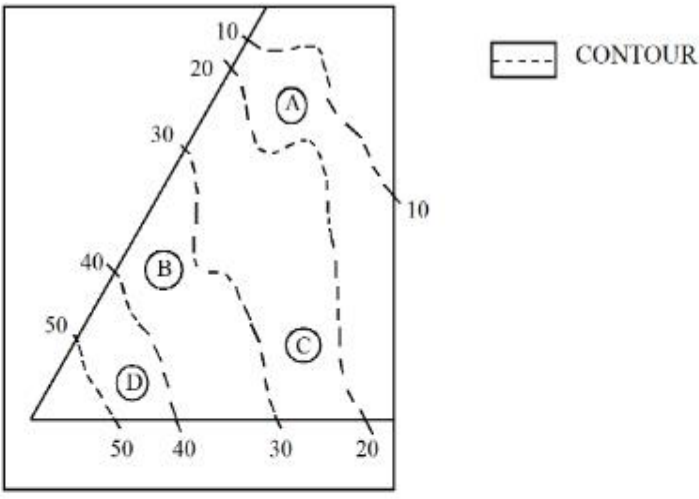
7155058736. Statement **I** is false but Statement **II** is true

Question Number : 99 Question Id : 7155052749 Question Type : MCQ Option Shuffling : Yes Is

Question Mandatory : No Calculator : None Response Time : N.A Think Time : N.A Minimum

Instruction Time : 0

Correct Marks : 4 Wrong Marks : 1



નીચે બે વિધાનો આપેલા છે.

વિધાન I : આપેલ રેખાકૃતિ માં, B નું સ્થાન C કરતાં ઊંચું છે.

વિધાન II : આપેલ રેખાકૃતિ માં, A નું સ્થાન C કરતાં નીચું છે.

ઉપરના વિધાનોના સંદર્ભમાં, નીચે આપેલા વિકલ્પોમાંથી સાચો જવાબ પસંદ કરો.

Options :

7155058733. બંને વિધાન I અને વિધાન II સાચા છે.

7155058734. બંને વિધાન I અને વિધાન II ખોટા છે.

7155058735. વિધાન I સાચું છે પણ વિધાન II ખોટું છે.

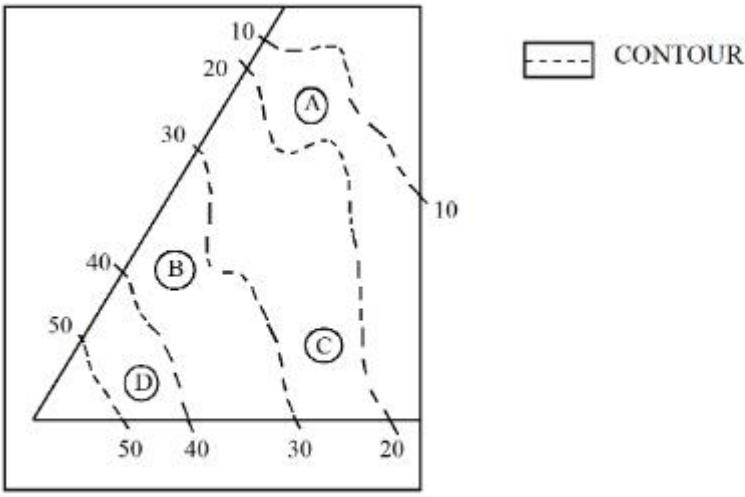
7155058736. વિધાન I ખોટું છે પણ વિધાન II સાચું છે.

Question Number : 100 Question Id : 7155052750 Question Type : MCQ Option Shuffling : Yes

Is Question Mandatory : No Calculator : None Response Time : N.A Think Time : N.A

Minimum Instruction Time : 0

Correct Marks : 4 Wrong Marks : 1



In the given diagram, the location of the A lies on which contour ?

Options :

7155058737. 20-30

7155058738. 30-40

7155058739. 10-20

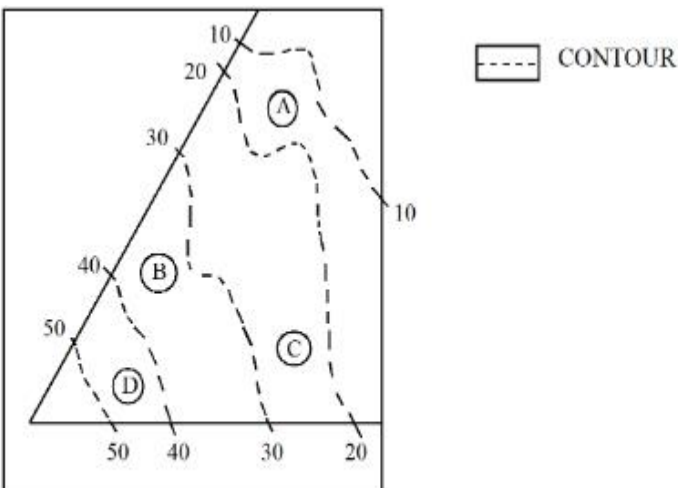
7155058740. 40-50

Question Number : 100 Question Id : 7155052750 Question Type : MCQ Option Shuffling : Yes

Is Question Mandatory : No Calculator : None Response Time : N.A Think Time : N.A

Minimum Instruction Time : 0

Correct Marks : 4 Wrong Marks : 1



આપેલ રેખાકૃતિ માં, A નું સ્થાન કયા સમોચ્ચ (પરિઘરેખા) (contour) પર આવેલ છે ?

Options :

7155058737. 20-30

7155058738. 30-40

7155058739. 10-20

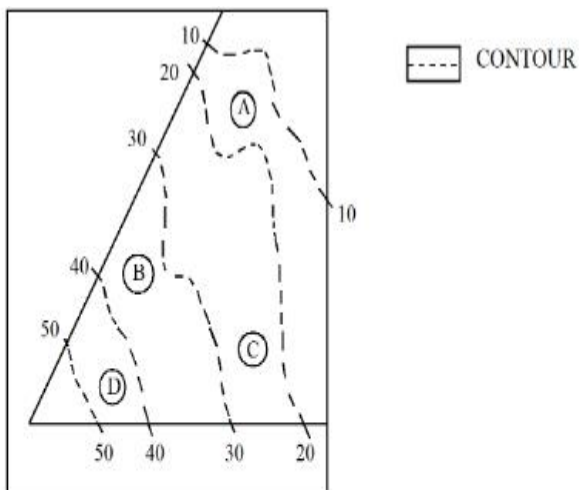
7155058740. 40-50

Question Number : 101 Question Id : 7155052751 Question Type : MCQ Option Shuffling : Yes

Is Question Mandatory : No Calculator : None Response Time : N.A Think Time : N.A

Minimum Instruction Time : 0

Correct Marks : 4 Wrong Marks : 1



Statement I: 'A' is located at the lowest point of the site.

Statement II: 'A' is located at a lower point than 'B' on the site.

In the light of the above statements, choose the *correct* answer from the options given below:

Options :

7155058741. Both Statement **I** and Statement **II** are true

7155058742. Both Statement **I** and Statement **II** are false

7155058743. Statement **I** is true but Statement **II** is false

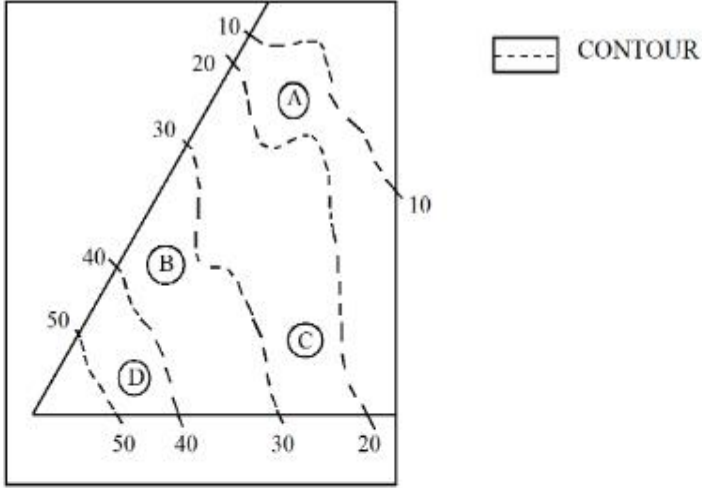
7155058744. Statement I is false but Statement II is true

Question Number : 101 Question Id : 7155052751 Question Type : MCQ Option Shuffling : Yes

Is Question Mandatory : No Calculator : None Response Time : N.A Think Time : N.A

Minimum Instruction Time : 0

Correct Marks : 4 Wrong Marks : 1



નીચે બે વિધાનો આપેલા છે.

વિધાનો I: 'A' સાઈટના સૌથી નીચા બિંદુએ સ્થિત છે.

વિધાનો II: 'A' સાઈટ પર 'B' કરતાં નીચલા બિંદુએ સ્થિત છે.

ઉપરના વિધાનોના સંદર્ભમાં, નીચે આપેલા વિકલ્પોમાંથી સાચો જવાબ પસંદ કરો.

Options :

7155058741. બંને વિધાન I અને વિધાન II સાચા છે.

7155058742. બંને વિધાન I અને વિધાન II ખોટા છે.

7155058743. વિધાન I સાચું છે પણ વિધાન II ખોટું છે.

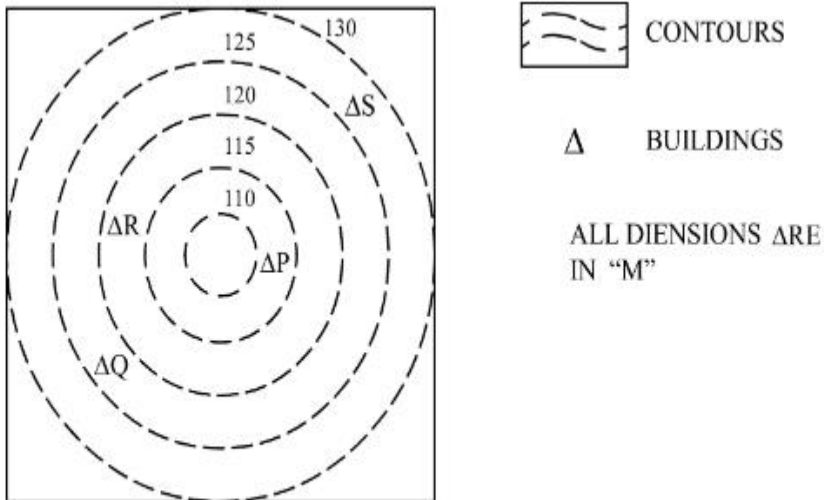
7155058744. વિધાન I ખોટું છે પણ વિધાન II સાચું છે.

Question Number : 102 Question Id : 7155052752 Question Type : MCQ Option Shuffling : Yes

Is Question Mandatory : No Calculator : None Response Time : N.A Think Time : N.A

Minimum Instruction Time : 0

Correct Marks : 4 Wrong Marks : 1



In the given diagram, how many contour levels are present in between "P" and "S"

Options :

7155058745. 2

7155058746. 3

7155058747. 1

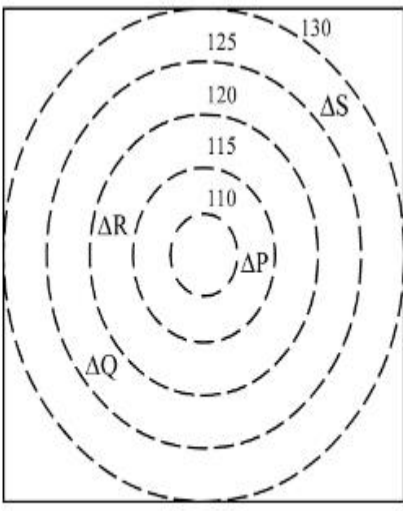
7155058748. 4

Question Number : 102 Question Id : 7155052752 Question Type : MCQ Option Shuffling : Yes


Is Question Mandatory : No Calculator : None Response Time : N.A Think Time : N.A

Minimum Instruction Time : 0

Correct Marks : 4 Wrong Marks : 1



 CONTOURS

 BUILDINGS

ALL DIENSIONS ARE
IN "M"

આપેલ રેખાકૃતિમાં, "P" અને "S" વચ્ચે કેટલા સમોરચ (પરિઘરેખા) (contour) સ્તરો હાજર છે ?

Options :

7155058745. 2

7155058746. 3

7155058747. 1

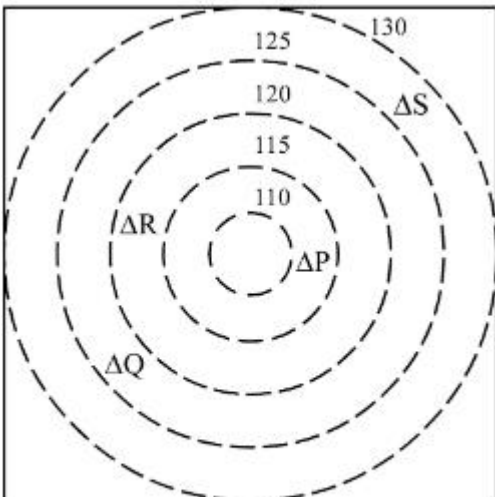
7155058748. 4


Question Number : 103 Question Id : 7155052753 Question Type : MCQ Option Shuffling : Yes

Is Question Mandatory : No Calculator : None Response Time : N.A Think Time : N.A

Minimum Instruction Time : 0

Correct Marks : 4 Wrong Marks : 1



 CONTOURS

 BUILDINGS

ALL DIENSIONS ARE
IN "M"

In the given diagram, "S" is higher than _____ meter from "R"

Options :

7155058749. 5

7155058750. 10

7155058751. 25

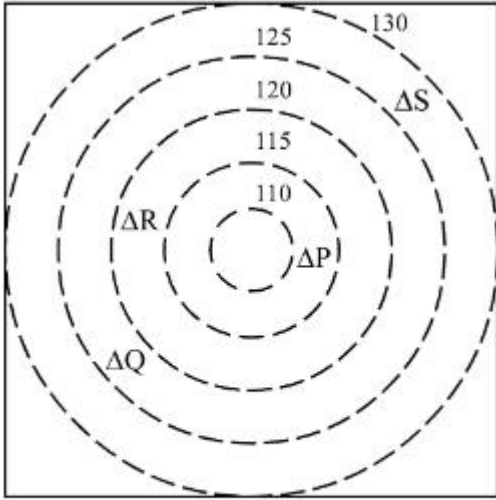
7155058752. 15


Question Number : 103 Question Id : 7155052753 Question Type : MCQ Option Shuffling : Yes

Is Question Mandatory : No Calculator : None Response Time : N.A Think Time : N.A

Minimum Instruction Time : 0

Correct Marks : 4 Wrong Marks : 1



 CONTOURS

 BUILDINGS

ALL DIENSIONS ARE
IN "M"

આપેલ રેખાકૃતિમાં, "S" એ "R" થી _____ મીટર કરતાં વધારે છે.

Options :

7155058749. 5

7155058750. 10

7155058751. 25

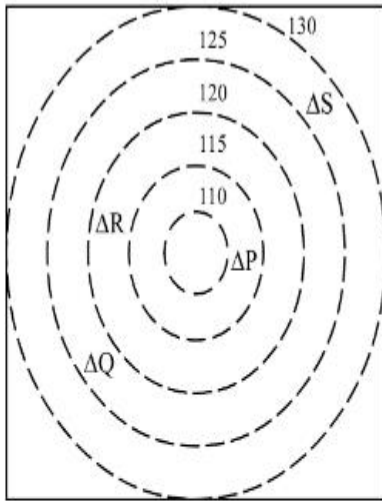
7155058752. 15

Question Number : 104 Question Id : 7155052754 Question Type : MCQ Option Shuffling : Yes

Is Question Mandatory : No Calculator : None Response Time : N.A Think Time : N.A

Minimum Instruction Time : 0

Correct Marks : 4 Wrong Marks : 1



 CONTOURS

 BUILDINGS

ALL DIENSIONS ARE
IN "M"

Based on the given diagram:

Statement I : "R" is higher than "P" and "Q"

Statement II : "S" is higher than "P", "Q" and "R"

In the light of the above statements, choose the *correct* answer from the options given below:

Options :

7155058753. Both Statement **I** and Statement **II** are true

7155058754. Both Statement **I** and Statement **II** are false

7155058755. Statement **I** is true but Statement **II** is false

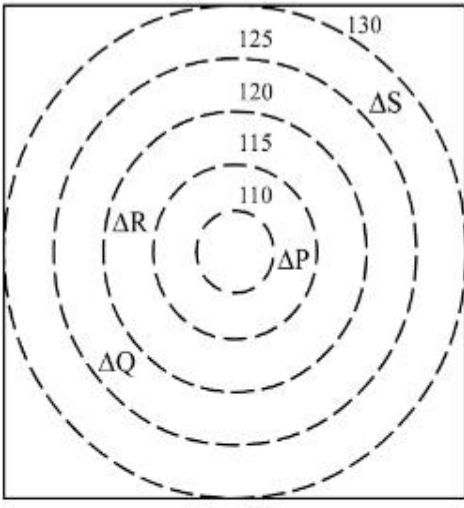
7155058756. Statement **I** is false but Statement **II** is true

Question Number : 104 Question Id : 7155052754 Question Type : MCQ Option Shuffling : Yes

Is Question Mandatory : No Calculator : None Response Time : N.A Think Time : N.A

Minimum Instruction Time : 0

Correct Marks : 4 Wrong Marks : 1



CONTOURS

Δ BUILDINGS

ALL DIENSIONS ARE
IN "M"

આપેલા રેખાકૃતિના આધારે

વિધાન I : "R" એ "P" અને "Q" કરતાં ઊંચું (વધારે) છે.

વિધાન II : "S" એ "P", "Q" અને "R" કરતા ઊંચું (વધારે) છે.

ઉપરના વિધાનોના સંદર્ભમાં, નીચે આપેલા વિકલ્પોમાંથી સાચો જવાબ પસંદ કરો.

Options :

7155058753. બંને વિધાન I અને વિધાન II સાચા છે.

7155058754. બંને વિધાન I અને વિધાન II ખોટા છે.

7155058755. વિધાન I સાચું છે પણ વિધાન II ખોટું છે.

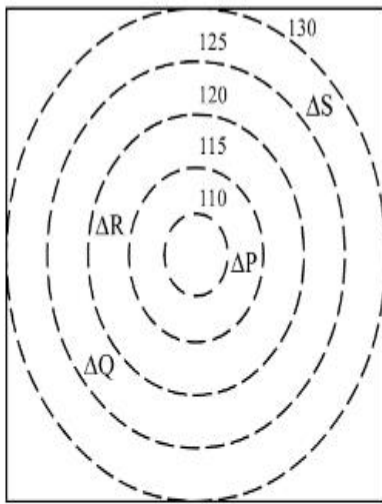
7155058756. વિધાન I ખોટું છે પણ વિધાન II સાચું છે.

Question Number : 105 Question Id : 7155052755 Question Type : MCQ Option Shuffling : Yes

Is Question Mandatory : No Calculator : None Response Time : N.A Think Time : N.A

Minimum Instruction Time : 0

Correct Marks : 4 Wrong Marks : 1



 CONTOURS

 BUILDINGS

ALL DIENSIONS ARE
IN "M"

Based on the given diagram:

Statement I : "P" is located at a height of 110 M

Statement II : "Q" is located 5 M lower than "S"

In the light of the above statements, choose the *correct* answer from the options given below:

Options :

7155058757. Both Statement **I** and Statement **II** are true

7155058758. Both Statement **I** and Statement **II** are false

7155058759. Statement **I** is true but Statement **II** is false

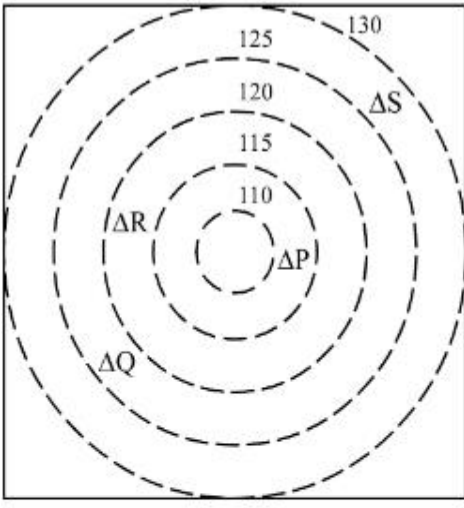
7155058760. Statement **I** is false but Statement **II** is true

Question Number : 105 Question Id : 7155052755 Question Type : MCQ Option Shuffling : Yes

Is Question Mandatory : No Calculator : None Response Time : N.A Think Time : N.A

Minimum Instruction Time : 0

Correct Marks : 4 Wrong Marks : 1



CONTOURS

Δ BUILDINGS

ALL DIENSIONS ARE
IN "M"

આપેલ રેખાકૃતિના આધારે

વિધાન I : "P" એ 110 M ની ઊંચાઈ પર સ્થિત છે.

વિધાન II : "Q" એ "S" કરતાં 5 M નીચું સ્થિત છે.

ઉપરના વિધાનોના સંદર્ભમાં, નીચે આપેલા વિકલ્પોમાંથી સાચો જવાબ પસંદ કરો.

Options :

7155058757. બંને વિધાન I અને વિધાન II સાચા છે.

7155058758. બંને વિધાન I અને વિધાન II ખોટા છે.

7155058759. વિધાન I સાચું છે પણ વિધાન II ખોટું છે.

7155058760. વિધાન I ખોટું છે પણ વિધાન II સાચું છે.

Drawing

Section Id :	715505167
Section Number :	5
Section type :	Offline
Mandatory or Optional :	Mandatory
Number of Questions :	2

Number of Questions to be attempted :	2
Section Marks :	100
Enable Mark as Answered Mark for Review and Clear Response :	Yes
Maximum Instruction Time :	0
Sub-Section Number :	1
Sub-Section Id :	715505167
Question Shuffling Allowed :	No
Is Section Default? :	null

Question Number : 106 Question Id : 7155052756 Question Type : SUBJECTIVE Consider As Subjective : Yes Calculator : None Response Time : N.A Think Time : N.A Minimum Instruction Time : 0

Correct Marks : 50

Draw a proportionate sketch of given reference image. Use black and white rendering techniques of your choice.



Question Number : 106 Question Id : 7155052756 Question Type : SUBJECTIVE Consider As Subjective : Yes Calculator : None Response Time : N.A Think Time : N.A Minimum Instruction Time : 0

Correct Marks : 50

આપેલ સંદર્ભ છબીનું સપ્રમાણ રેખાચિત્ર દોરો. છાયાંકન માટે કાળી-સફેદ રેખાંકન પદ્ધતિનો ઉપયોગ કરો.



Question Number : 107 Question Id : 7155052757 Question Type : SUBJECTIVE Consider As Subjective : Yes Calculator : None Response Time : N.A Think Time : N.A Minimum Instruction Time : 0

Correct Marks : 50

Use the basic 2D shapes found in a motor cycle and create an interesting 2D composition of your choice, colour with any three colours of your choice.

Question Number : 107 Question Id : 7155052757 Question Type : SUBJECTIVE Consider As Subjective : Yes Calculator : None Response Time : N.A Think Time : N.A Minimum Instruction Time : 0

Correct Marks : 50

મોટર સાયકલ માંથી મળતા 2D આકાર નો ઉપયોગ કરીને, તમારી પસંદગી નું 2D રચના બનાવો. તમારી પસંદગી ના કોઈ પણ ત્રણ રંગ નો ઉપયોગ કરી રંગ પૂરો.