

National Testing Agency

Question Paper Name :	B PLANNING 28th Jan 2023 Shift 2
Subject Name :	B PLANNING
Creation Date :	2023-01-28 23:48:18
Duration :	180
Total Marks :	400
Display Marks:	Yes

B PLANNING

Group Number :	1
Group Id :	71550528
Group Maximum Duration :	0
Group Minimum Duration :	180
Show Attended Group? :	No
Edit Attended Group? :	No
Break time :	0
Group Marks :	400
Is this Group for Examiner? :	No
Examiner permission :	Cant View
Show Progress Bar? :	No

Mathematics Section A

Section Id :	715505155
Section Number :	1

Section type :	Online
Mandatory or Optional :	Mandatory
Number of Questions :	20
Number of Questions to be attempted :	20
Section Marks :	80
Enable Mark as Answered Mark for Review and Clear Response :	Yes
Maximum Instruction Time :	0
Sub-Section Number :	1
Sub-Section Id :	715505155
Question Shuffling Allowed :	Yes
Is Section Default? :	null

Question Number : 1 Question Id : 7155052464 Question Type : MCQ Option Shuffling : Yes Is Question Mandatory : No Calculator : None Response Time : N.A Think Time : N.A Minimum Instruction Time : 0

Correct Marks : 4 Wrong Marks : 1

Let R_1 and R_2 be two relations on \mathbb{R}^2 defined as

(a, b) R_1 (c, d) if $ad - bc \geq 0$

(a, b) R_2 (c, d) if $a + d \geq b + c$. Then :

Options :

7155057691. R_1 is transitive but R_2 is not transitive

7155057692. R_2 is transitive but R_1 is not transitive

7155057693. Both R_1 and R_2 are transitive

7155057694. Neither R_1 nor R_2 is transitive

Question Number : 1 Question Id : 7155052464 Question Type : MCQ Option Shuffling : Yes Is
Question Mandatory : No Calculator : None Response Time : N.A Think Time : N.A Minimum
Instruction Time : 0

Correct Marks : 4 Wrong Marks : 1

\mathbb{R}^2 పై రెండు సంబంధాలు R_1 మరియు R_2 లు

$ad - bc \geq 0$ అయితే $(a, b) R_1 (c, d)$

$a + d \geq b + c$ అయితే, $(a, b) R_2 (c, d)$ చే నిర్వచితం. అప్పుడు :

Options :

7155057691. R_1 సకర్మకం కాని R_2 సకర్మకం కాదు

7155057692. R_2 సకర్మకం కాని R_1 సకర్మకం కాదు

7155057693. R_1 మరియు R_2 రెండూ సకర్మకం

7155057694. R_1 మరియు R_2 రెండూ సకర్మకం కాదు

Question Number : 2 Question Id : 7155052465 Question Type : MCQ Option Shuffling : Yes Is
Question Mandatory : No Calculator : None Response Time : N.A Think Time : N.A Minimum
Instruction Time : 0

Correct Marks : 4 Wrong Marks : 1

Let α and β be the roots of $x^2 - 3x + 9 = 0$. Then $\left(\frac{\beta^{30}}{(9\alpha)^{10}} + \frac{\alpha^{30}}{(9\beta)^{10}} \right)^2$ is equal to

Options :

7155057695. 1

7155057696. $\frac{1}{9}$

7155057697. 3

7155057698. 9

Question Number : 2 Question Id : 7155052465 Question Type : MCQ Option Shuffling : Yes Is Question Mandatory : No Calculator : None Response Time : N.A Think Time : N.A Minimum Instruction Time : 0

Correct Marks : 4 Wrong Marks : 1

$x^2 - 3x + 9 = 0$ యొక్క మూలాలు α మరియు β అనుకోండి. అప్పుడు $\left(\frac{\beta^{30}}{(9\alpha)^{10}} + \frac{\alpha^{30}}{(9\beta)^{10}} \right)^2$

= :

Options :

7155057695. 1

7155057696. $\frac{1}{9}$

7155057697. 3

7155057698. 9

Question Number : 3 Question Id : 7155052466 Question Type : MCQ Option Shuffling : Yes Is Question Mandatory : No Calculator : None Response Time : N.A Think Time : N.A Minimum Instruction Time : 0

Correct Marks : 4 Wrong Marks : 1

For $z = 2 + 5i$, the modulus of $2z^3 + 21z^2 - 58z + 4$ is :

Options :

7155057699. 1153

7155057700. 947

7155057701. 537

7155057702. 837

Question Number : 3 Question Id : 7155052466 Question Type : MCQ Option Shuffling : Yes Is Question Mandatory : No Calculator : None Response Time : N.A Think Time : N.A Minimum Instruction Time : 0

Correct Marks : 4 Wrong Marks : 1

$z=2+5i$ కి, $2z^3+21z^2-58z+4$ యొక్క పరమమూల్యం :

Options :

7155057699. 1153

7155057700. 947

7155057701. 537

7155057702. 837

Question Number : 4 Question Id : 7155052467 Question Type : MCQ Option Shuffling : Yes Is Question Mandatory : No Calculator : None Response Time : N.A Think Time : N.A Minimum Instruction Time : 0

Correct Marks : 4 Wrong Marks : 1

If the system of equations

$$Kx - \sqrt{2}y + \sqrt{5}z = \sqrt{7}$$

$$\sqrt{5}x + \sqrt{3}y - \sqrt{2}z = \sqrt{11}$$

$$30x + (3\sqrt{15} - 5\sqrt{6})y + (5\sqrt{15} - 3\sqrt{10})z = 5\sqrt{21} + 3\sqrt{55}$$

has infinitely many solutions, then K^2 is

Options :

7155057703. 27

7155057704. $\frac{1}{3}$

7155057705. 9

7155057706. 3

Question Number : 4 Question Id : 7155052467 Question Type : MCQ Option Shuffling : Yes Is Question Mandatory : No Calculator : None Response Time : N.A Think Time : N.A Minimum Instruction Time : 0

Correct Marks : 4 Wrong Marks : 1

ఇచ్చిన సమీకరణాల వ్యవస్థకు

$$Kx - \sqrt{2}y + \sqrt{5}z = \sqrt{7}$$

$$\sqrt{5}x + \sqrt{3}y - \sqrt{2}z = \sqrt{11}$$

$$30x + (3\sqrt{15} - 5\sqrt{6})y + (5\sqrt{15} - 3\sqrt{10})z = 5\sqrt{21} + 3\sqrt{55}$$

అంతులేని సాధనలు ఉన్నట్లు అయితే, K^2 :

Options :

7155057703. 27

7155057704. $\frac{1}{3}$

7155057705. 9

7155057706. 3

Question Number : 5 Question Id : 7155052468 Question Type : MCQ Option Shuffling : Yes Is Question Mandatory : No Calculator : None Response Time : N.A Think Time : N.A Minimum

Instruction Time : 0

Correct Marks : 4 Wrong Marks : 1

For $\alpha, \beta \in \mathbb{R}$, if the matrices $A = \begin{pmatrix} \alpha & 0 \\ 0 & \beta \end{pmatrix}$, $B = \begin{pmatrix} \alpha & 0 \\ 0 & \alpha \end{pmatrix}$ and $I = \begin{pmatrix} 1 & 0 \\ 0 & 1 \end{pmatrix}$ satisfy the equation

$(A*B)*2I = 20I$, where $*$ is defined as $A*B = A^2 + B^2$, then $|\alpha\beta|$ is equal to :

Options :

7155057707. $2\sqrt{3}$

7155057708. $2\sqrt{2}$

7155057709. 4

7155057710. 2

Question Number : 5 Question Id : 7155052468 Question Type : MCQ Option Shuffling : Yes Is

Question Mandatory : No Calculator : None Response Time : N.A Think Time : N.A Minimum

Instruction Time : 0

Correct Marks : 4 Wrong Marks : 1

$\alpha, \beta \in \mathbb{R}$ కి, $A = \begin{pmatrix} \alpha & 0 \\ 0 & \beta \end{pmatrix}$, $B = \begin{pmatrix} \alpha & 0 \\ 0 & \alpha \end{pmatrix}$ మరియు $I = \begin{pmatrix} 1 & 0 \\ 0 & 1 \end{pmatrix}$ మాత్రికలు $(A*B)*2I = 20I$ సమీకరణాన్ని తృప్తి

పరిచే, ఇక్కడ $A*B = A^2 + B^2$ గా నిర్వచితం, అప్పుడు $|\alpha\beta| = \underline{\hspace{2cm}}$.

Options :

7155057707. $2\sqrt{3}$

7155057708. $2\sqrt{2}$

7155057709. 4

7155057710. 2

Question Number : 6 Question Id : 7155052469 Question Type : MCQ Option Shuffling : Yes Is
Question Mandatory : No Calculator : None Response Time : N.A Think Time : N.A Minimum
Instruction Time : 0

Correct Marks : 4 Wrong Marks : 1

The sum of the first eleven terms of the series is $\frac{1}{1+1^2+1^4} + \frac{2}{1+2^2+2^4} + \frac{3}{1+3^2+3^4} + \dots$

Options :

7155057711. $\frac{61}{133}$

7155057712. $\frac{66}{133}$

7155057713. $\frac{16}{33}$

7155057714. $\frac{33}{67}$

Question Number : 6 Question Id : 7155052469 Question Type : MCQ Option Shuffling : Yes Is
Question Mandatory : No Calculator : None Response Time : N.A Think Time : N.A Minimum
Instruction Time : 0

Correct Marks : 4 Wrong Marks : 1

$\frac{1}{1+1^2+1^4} + \frac{2}{1+2^2+2^4} + \frac{3}{1+3^2+3^4} + \dots$ శ్రేణిలోని మొదటి పదకొండు మొత్తం :

Options :

7155057711. $\frac{61}{133}$

7155057712. $\frac{66}{133}$

7155057713. $\frac{16}{33}$

7155057714. 67

**Question Number : 7 Question Id : 7155052470 Question Type : MCQ Option Shuffling : Yes Is
Question Mandatory : No Calculator : None Response Time : N.A Think Time : N.A Minimum
Instruction Time : 0**

Correct Marks : 4 Wrong Marks : 1

$\lim_{x \rightarrow 0} (1 + 3x)^{\frac{x+2}{x}}$ is equal to

Options :

7155057715. e

7155057716. e^3

7155057717. e^6

7155057718. e^9

**Question Number : 7 Question Id : 7155052470 Question Type : MCQ Option Shuffling : Yes Is
Question Mandatory : No Calculator : None Response Time : N.A Think Time : N.A Minimum
Instruction Time : 0**

Correct Marks : 4 Wrong Marks : 1

$\lim_{x \rightarrow 0} (1 + 3x)^{\frac{x+2}{x}} = \underline{\hspace{2cm}}$.

Options :

7155057715. e

7155057716. e^3

7155057717. e^6

7155057718. e⁹

Question Number : 8 Question Id : 7155052471 Question Type : MCQ Option Shuffling : Yes Is Question Mandatory : No Calculator : None Response Time : N.A Think Time : N.A Minimum Instruction Time : 0

Correct Marks : 4 Wrong Marks : 1

Let $P(\alpha, \beta, \lambda)$ be the image of the point $Q(1, 2, 0)$ in the line $\frac{x-5}{3} = \frac{y-12}{1} = \frac{z-10}{2}$, then $(PQ)^2$ is equal to

Options :

7155057719. 90

7155057720. 180

7155057721. 360

7155057722. 270

Question Number : 8 Question Id : 7155052471 Question Type : MCQ Option Shuffling : Yes Is Question Mandatory : No Calculator : None Response Time : N.A Think Time : N.A Minimum Instruction Time : 0

Correct Marks : 4 Wrong Marks : 1

$Q(1, 2, 0)$ బిందువు ప్రతిబింబం $\frac{x-5}{3} = \frac{y-12}{1} = \frac{z-10}{2}$ రేఖలో $P(\alpha, \beta, \lambda)$ అయితే $(PQ)^2$ = _____.

Options :

7155057719. 90

7155057720. 180

7155057721. 360

7155057722. 270

Question Number : 9 Question Id : 7155052472 Question Type : MCQ Option Shuffling : Yes Is Question Mandatory : No Calculator : None Response Time : N.A Think Time : N.A Minimum Instruction Time : 0

Correct Marks : 4 Wrong Marks : 1

A box contains 7 red and 9 white balls. The number of ways of drawing 8 balls such that there are at least three balls of each colour, is :

Options :

7155057723. 8820

7155057724. 10584

7155057725. 1764

7155057726. 3515

Question Number : 9 Question Id : 7155052472 Question Type : MCQ Option Shuffling : Yes Is Question Mandatory : No Calculator : None Response Time : N.A Think Time : N.A Minimum Instruction Time : 0

Correct Marks : 4 Wrong Marks : 1

ఒక డబ్బాలో 7 ఎరుపు మరియు 9 తెలుపు బంతులున్నాయి. ప్రతి రంగు కనీసం 3 బంతులుండేలా 8 బంతులను తీయు విధాల సంఖ్య :

Options :

7155057723. 8820

7155057724. 10584

7155057725. 1764

7155057726. 3515

Question Number : 10 Question Id : 7155052473 Question Type : MCQ Option Shuffling : Yes Is Question Mandatory : No Calculator : None Response Time : N.A Think Time : N.A Minimum Instruction Time : 0

Correct Marks : 4 Wrong Marks : 1

Let $[t]$ denote the greatest integer function. If $\int_0^1 [1+x^2+x^4] dx = a$, then $36a - 25a^2 + 8a^3 - a^4$ is equal to

Options :

7155057727. 19

7155057728. -19

7155057729. 18

7155057730. -21

Question Number : 10 Question Id : 7155052473 Question Type : MCQ Option Shuffling : Yes Is Question Mandatory : No Calculator : None Response Time : N.A Think Time : N.A Minimum Instruction Time : 0

Correct Marks : 4 Wrong Marks : 1

$[t]$ ఒక గరిష్ఠ పూర్ణాంక ప్రమేయాన్ని సూచిస్తుంది. $\int_0^1 [1+x^2+x^4] dx = a$, అయితే, $36a - 25a^2 + 8a^3 - a^4$
= _____.

Options :

7155057727. 19

7155057728. -19

7155057729. 18

7155057730. -21

Question Number : 11 Question Id : 7155052474 Question Type : MCQ Option Shuffling : Yes Is

Question Mandatory : No Calculator : None Response Time : N.A Think Time : N.A Minimum

Instruction Time : 0

Correct Marks : 4 Wrong Marks : 1

Let $PL = 8$ units and $QM = 2$ units be two parallel line segments such that the line segments PM and QL intersect at the point R . If PL and QM are tangents to a circle passing through points P, Q, R then radius of this circle is

Options :

7155057731. $\sqrt{2}$

7155057732. 2

7155057733. $2\sqrt{2}$

7155057734. 4

Question Number : 11 Question Id : 7155052474 Question Type : MCQ Option Shuffling : Yes Is

Question Mandatory : No Calculator : None Response Time : N.A Think Time : N.A Minimum

Instruction Time : 0

Correct Marks : 4 Wrong Marks : 1

PM మరియు QL రేఖాఖండాలు R బిందువు వడ ఖండిచుకునునట్లు $PL = 8$ యూనిట్లు మరియు $QM = 2$ యూనిట్లు గా రెండు సమాంతర రేఖాఖండాలనుకోండి. P, Q, R బిందువుల గుండా పోవు వృత్తానికి PL మరియు QM స్పర్శరేఖలయితే, ఆ వృత్త వ్యాసార్థం :

Options :

7155057731. $\sqrt{2}$

7155057732. 2

7155057733. $2\sqrt{2}$

7155057734. 4

Question Number : 12 Question Id : 7155052475 Question Type : MCQ Option Shuffling : Yes Is Question Mandatory : No Calculator : None Response Time : N.A Think Time : N.A Minimum Instruction Time : 0

Correct Marks : 4 Wrong Marks : 1

For some $\alpha \in \mathbb{N}$, let PQR be a triangle with two fixed vertices P(2, 5) and Q(α , -11). If the point R moves on the line $l_1: 9x + 7y + \alpha = 0$, then the centroid of ΔPQR moves on the line l_2 , which is parallel to l_1 at a distance $\frac{20}{3\sqrt{130}}$ units from it. If the distance of Q from l_2 is $\frac{k}{3\sqrt{130}}$, then k is equal to :

Options :

7155057735. 117

7155057736. 129

7155057737. 131

7155057738. 133

Question Number : 12 Question Id : 7155052475 Question Type : MCQ Option Shuffling : Yes Is Question Mandatory : No Calculator : None Response Time : N.A Think Time : N.A Minimum Instruction Time : 0

Correct Marks : 4 Wrong Marks : 1

కొన్ని $\alpha \in \mathbb{N}$ కి, PQR రెండు నిశ్చల శీర్షాలు $P(2, 5)$ మరియు $Q(\alpha, -11)$ కలిగిన ఒక త్రిభుజం అనుకోండి. R బిందువు $l_1: 9x + 7y + \alpha = 0$ రేఖ పైన కదులుతుంటే, l_1 కి $\frac{20}{3\sqrt{130}}$ యూనిట్ల దూరంలో ఉండి, దానికి సమాంతరంగా ఉన్న l_2 పైన ΔPQR యొక్క గురుత్వ కేంద్రం కదులుతుంది. l_2 రేఖ నుండి Q బిందువు దూరం $\frac{k}{3\sqrt{130}}$, అయితే, k విలువ :

Options :

7155057735. 117

7155057736. 129

7155057737. 131

7155057738. 133

Question Number : 13 Question Id : 7155052476 Question Type : MCQ Option Shuffling : Yes Is Question Mandatory : No Calculator : None Response Time : N.A Think Time : N.A Minimum Instruction Time : 0

Correct Marks : 4 Wrong Marks : 1

Let $A_i(x_i, y_i)$, $i = 1, 2, 3$ be points on the circle $x^2 + y^2 = 10$ such that A_1 lies in the 1st quadrant and it is the image of point A_2 with respect to y -axis. If the distance of point A_1 from each of the points A_2 and A_3 is 2, then twenty times the area of the $\Delta A_1 A_2 A_3$ is

Options :

7155057739. 12

7155057740. 30

7155057741. 24

7155057742. 48

Question Number : 13 Question Id : 7155052476 Question Type : MCQ Option Shuffling : Yes Is Question Mandatory : No Calculator : None Response Time : N.A Think Time : N.A Minimum Instruction Time : 0

Correct Marks : 4 Wrong Marks : 1

A_1 మొదటి పాదంలో ఉండి మరియు అది y -అక్షం దృష్ట్యా A_2 బిందువు ప్రతిబింబం

అయ్యేలా $x^2 + y^2 = 10$ వృత్తం పైనున్న బిందువులు $A_i(x_i, y_i), i = 1, 2, 3$ అనుకోండి.

A_2 మరియు A_3 బిందువుల నుండి A_1 దూరం 2 అయితే, $\Delta A_1 A_2 A_3$ యొక్క వైశాల్యానికి ఇరవై రేట్లు :

Options :

7155057739. 12

7155057740. 30

7155057741. 24

7155057742. 48

Question Number : 14 Question Id : 7155052477 Question Type : MCQ Option Shuffling : Yes Is Question Mandatory : No Calculator : None Response Time : N.A Think Time : N.A Minimum Instruction Time : 0

Correct Marks : 4 Wrong Marks : 1

The remainder when 7^{89} is divided by 15 is

Options :

7155057743. 5

7155057744. 7

7155057745. 9

7155057746. 11

Question Number : 14 Question Id : 7155052477 Question Type : MCQ Option Shuffling : Yes Is Question Mandatory : No Calculator : None Response Time : N.A Think Time : N.A Minimum Instruction Time : 0

Correct Marks : 4 Wrong Marks : 1

7⁸⁹ ని 15 చే భాగింపగా వచ్చు శేషం :

Options :

7155057743. 5

7155057744. 7

7155057745. 9

7155057746. 11

Question Number : 15 Question Id : 7155052478 Question Type : MCQ Option Shuffling : Yes Is Question Mandatory : No Calculator : None Response Time : N.A Think Time : N.A Minimum Instruction Time : 0

Correct Marks : 4 Wrong Marks : 1

If the plane $y = \alpha x - \beta z + \gamma$ passing through the point $(1, -1, 3)$ is perpendicular to each of the planes $2x + y + z = 1$ and $3x - 2y + 2z = 0$, then $\alpha + \beta + \gamma$ is equal to :

Options :

7155057747. 5

7155057748. 13

7155057749. 19

7155057750. 27

Question Number : 15 Question Id : 7155052478 Question Type : MCQ Option Shuffling : Yes Is

Question Mandatory : No Calculator : None Response Time : N.A Think Time : N.A Minimum

Instruction Time : 0

Correct Marks : 4 Wrong Marks : 1

(1, -1, 3) బిందువు గుండా పోవు $y = \alpha x - \beta z + \gamma$ తలం, $2x + y + z = 1$ మరియు $3x - 2y + 2z = 0$, లలో ప్రతి తలానికి లంబంగా ఉంటే, $\alpha + \beta + \gamma = \underline{\hspace{2cm}}$.

Options :

7155057747. 5

7155057748. 13

7155057749. 19

7155057750. 27

Question Number : 16 Question Id : 7155052479 Question Type : MCQ Option Shuffling : Yes Is

Question Mandatory : No Calculator : None Response Time : N.A Think Time : N.A Minimum

Instruction Time : 0

Correct Marks : 4 Wrong Marks : 1

Let $\vec{a} = \hat{i} + 2\hat{j} + 3\hat{k}$, $\vec{b} = \hat{i} - \hat{j} + 2\hat{k}$, $\vec{c} = 2\hat{i} + \hat{j} - 4\hat{k}$ be three vectors. If \vec{r} is the vector such that

$\vec{r} \times \vec{a} = \left(\vec{b} + \vec{c} \right) \times \vec{a}$ and $\vec{r} \cdot \left(\vec{b} - \vec{c} \right) = 0$, then $\vec{r} \cdot \left(\hat{i} + \hat{j} - \hat{k} \right)$ is equal to :

Options :

7155057751. 3

7155057752. 4

7155057753. 5

7155057754. 6

Question Number : 16 Question Id : 7155052479 Question Type : MCQ Option Shuffling : Yes Is Question Mandatory : No Calculator : None Response Time : N.A Think Time : N.A Minimum Instruction Time : 0

Correct Marks : 4 Wrong Marks : 1

$\vec{a} = \hat{i} + 2\hat{j} + 3\hat{k}$, $\vec{b} = \hat{i} - \hat{j} + 2\hat{k}$, $\vec{c} = 2\hat{i} + \hat{j} - 4\hat{k}$ మూడు సదిశలనుకోండి. $\vec{r} \times \vec{a} = \begin{pmatrix} \vec{b} & \vec{c} \end{pmatrix} \times \vec{a}$ మరియు

$\vec{r} \cdot \begin{pmatrix} \vec{b} & \vec{c} \end{pmatrix} = 0$, అయ్యేలా \vec{r} ఒక సదిశ అయితే, $\vec{r} \cdot (\hat{i} + \hat{j} - \hat{k}) = \underline{\hspace{2cm}}$.

Options :

7155057751. 3

7155057752. 4

7155057753. 5

7155057754. 6

Question Number : 17 Question Id : 7155052480 Question Type : MCQ Option Shuffling : Yes Is Question Mandatory : No Calculator : None Response Time : N.A Think Time : N.A Minimum Instruction Time : 0

Correct Marks : 4 Wrong Marks : 1

The probability that a randomly selected root of the equation $1 + x + x^2 + \dots + x^{118} = 0$ satisfies the equation $x^7 = 1$, is

Options :

7155057755. 0

7155057756. $\frac{1}{59}$

7155057757. $\frac{3}{59}$

7155057758. $\frac{7}{118}$

Question Number : 17 Question Id : 7155052480 Question Type : MCQ Option Shuffling : Yes Is Question Mandatory : No Calculator : None Response Time : N.A Think Time : N.A Minimum Instruction Time : 0

Correct Marks : 4 Wrong Marks : 1

యాదృచ్ఛికంగా ఎన్నుకున్న సమీకరణం $1 + x + x^2 + \dots + x^{118} = 0$ యొక్క మూలం, సమీకరణం $x^7 = 1$ ని

తృప్తి పరిచే సంభావ్యత :

Options :

7155057755. 0

7155057756. $\frac{1}{59}$

7155057757. $\frac{3}{59}$

7155057758. $\frac{7}{118}$

Question Number : 18 Question Id : 7155052481 Question Type : MCQ Option Shuffling : Yes Is Question Mandatory : No Calculator : None Response Time : N.A Think Time : N.A Minimum Instruction Time : 0

Correct Marks : 4 Wrong Marks : 1

Let X have the binomial distribution B(n, p). If its mean is 3 and variance is 2, then $P(X < \frac{n}{4})$ is equal to :

Options :

7155057759. $\frac{29 \times 2^8}{3^9}$

7155057760. $\frac{25 \times 2^9}{3^9}$

$$7155057761. \frac{163}{3^9}$$

$$7155057762. \frac{835}{3^9}$$

Question Number : 18 Question Id : 7155052481 Question Type : MCQ Option Shuffling : Yes Is Question Mandatory : No Calculator : None Response Time : N.A Think Time : N.A Minimum Instruction Time : 0

Correct Marks : 4 Wrong Marks : 1

X, ద్విపద విస్తరణ B (n, p) ని కలిగి ఉందనుకోండి. దాని మొక్క మధ్యమం 3 మరియు విస్తృతి 2 అయితే,

$$P(X < \frac{n}{4}) = \underline{\hspace{2cm}}.$$

Options :

$$7155057759. \frac{29 \times 2^8}{3^9}$$

$$7155057760. \frac{25 \times 2^9}{3^9}$$

$$7155057761. \frac{163}{3^9}$$

$$7155057762. \frac{835}{3^9}$$

Question Number : 19 Question Id : 7155052482 Question Type : MCQ Option Shuffling : Yes Is Question Mandatory : No Calculator : None Response Time : N.A Think Time : N.A Minimum Instruction Time : 0

Correct Marks : 4 Wrong Marks : 1

The domain of the function $f(x) = \cos^{-1}\left(\frac{x^2 - 3x + 2}{x^2 + 2x - 1}\right)$ is :

Options :

7155057763. $\left(\sqrt{2}-1, \frac{3}{5}\right]$

7155057764. $\left[\frac{3}{5}, \infty\right)$

7155057765. $\mathbb{R} - \{-\sqrt{2}-1, \sqrt{2}-1\}$

7155057766. $(-\infty, -1-\sqrt{2}) \cup (\sqrt{2}-1, \infty)$

Question Number : 19 Question Id : 7155052482 Question Type : MCQ Option Shuffling : Yes Is

Question Mandatory : No Calculator : None Response Time : N.A Think Time : N.A Minimum

Instruction Time : 0

Correct Marks : 4 Wrong Marks : 1

$f(x) = \cos^{-1}\left(\frac{x^2-3x+2}{x^2+2x-1}\right)$ ప్రమేయ పరిధి :

Options :

7155057763. $\left(\sqrt{2}-1, \frac{3}{5}\right]$

7155057764. $\left[\frac{3}{5}, \infty\right)$

7155057765. $\mathbb{R} - \{-\sqrt{2}-1, \sqrt{2}-1\}$

7155057766. $(-\infty, -1-\sqrt{2}) \cup (\sqrt{2}-1, \infty)$

Question Number : 20 Question Id : 7155052483 Question Type : MCQ Option Shuffling : Yes Is

Question Mandatory : No Calculator : None Response Time : N.A Think Time : N.A Minimum

Instruction Time : 0

Correct Marks : 4 Wrong Marks : 1

Which of the following statements is a tautology ?

Options :

7155057767. $((p \Rightarrow q) \vee p) \Rightarrow q$

7155057768. $((p \wedge q) \Rightarrow p) \Rightarrow q$

7155057769. $((p \wedge q) \wedge (\sim q)) \Rightarrow p$

7155057770. $((p \Rightarrow q) \vee p) \Rightarrow p$

Question Number : 20 Question Id : 7155052483 Question Type : MCQ Option Shuffling : Yes Is

Question Mandatory : No Calculator : None Response Time : N.A Think Time : N.A Minimum

Instruction Time : 0

Correct Marks : 4 Wrong Marks : 1

కింది ప్రకటనలలో ఏది నిత్యసత్యం ?

Options :

7155057767. $((p \Rightarrow q) \vee p) \Rightarrow q$

7155057768. $((p \wedge q) \Rightarrow p) \Rightarrow q$

7155057769. $((p \wedge q) \wedge (\sim q)) \Rightarrow p$

7155057770. $((p \Rightarrow q) \vee p) \Rightarrow p$

Mathematics Section B

Section Id : 715505156

Section Number : 2

Section type : Online

Mandatory or Optional : Mandatory

Number of Questions :	10
Number of Questions to be attempted :	5
Section Marks :	20
Enable Mark as Answered Mark for Review and Clear Response :	Yes
Maximum Instruction Time :	0
Sub-Section Number :	1
Sub-Section Id :	715505156
Question Shuffling Allowed :	Yes
Is Section Default? :	null

Question Number : 21 Question Id : 7155052484 Question Type : SA Calculator : None
Response Time : N.A Think Time : N.A Minimum Instruction Time : 0

Correct Marks : 4 Wrong Marks : 1

The curve $y = x^2 + 1$ divides the area enclosed by the curves $y + |x| = 3$ and $y = |x-1|$ in the ratio $m : n$, where m and n are coprime, then $m + n$ is equal to _____ .

Response Type : Numeric

Evaluation Required For SA : Yes

Show Word Count : Yes

Answers Type : Range

Text Areas : PlainText

Possible Answers :

10 to 12

Question Number : 21 Question Id : 7155052484 Question Type : SA Calculator : None
Response Time : N.A Think Time : N.A Minimum Instruction Time : 0

Correct Marks : 4 Wrong Marks : 1

m మరియు n లు సహప్రధాన సంఖ్యలు కాగా, $y + |x| = 3$ మరియు $y = |x-1|$ వక్రాలచే ఆవృత్తమైన ప్రదేశాన్ని $y = x^2 + 1$ వక్రం $m : n$ నిష్పత్తి విభజిస్తుంటే, $m+n =$ _____ .

Response Type : Numeric

Evaluation Required For SA : Yes

Show Word Count : Yes

Answers Type : Range

Text Areas : PlainText

Possible Answers :

10 to 12

Question Number : 22 **Question Id :** 7155052485 **Question Type :** SA **Calculator :** None

Response Time : N.A **Think Time :** N.A **Minimum Instruction Time :** 0

Correct Marks : 4 **Wrong Marks :** 1

The number of ways in which 30 identical pens can be distributed among 12 students so that each student gets at least one pen and exactly two students get at least two pens each, is _____.

Response Type : Numeric

Evaluation Required For SA : Yes

Show Word Count : Yes

Answers Type : Range

Text Areas : PlainText

Possible Answers :

10 to 12

Question Number : 22 **Question Id :** 7155052485 **Question Type :** SA **Calculator :** None

Response Time : N.A **Think Time :** N.A **Minimum Instruction Time :** 0

Correct Marks : 4 **Wrong Marks :** 1

ప్రతి విద్యార్థి కనీసం ఒక కలం వచ్చేలా మరియు ఖచ్చితంగా ఇద్దరు విద్యార్థులకు కనీసం రెండు కలాలు వచ్చు విధంగా, 30 సారూప్య కలాలను 12 విద్యార్థులలో ఎన్ని విధాలుగా పంచవచ్చు _____.

Response Type : Numeric

Evaluation Required For SA : Yes

Show Word Count : Yes

Answers Type : Range

Text Areas : PlainText

Possible Answers :

10 to 12

Question Number : 23 Question Id : 7155052486 Question Type : SA Calculator : None

Response Time : N.A Think Time : N.A Minimum Instruction Time : 0

Correct Marks : 4 Wrong Marks : 1

Let $(1+x^2-x^4)^{12} = \sum_{n=0}^{48} a_n x^n$. Then $a_0 + a_2 + a_4 + \dots + a_{44}$ is equal to

Response Type : Numeric

Evaluation Required For SA : Yes

Show Word Count : Yes

Answers Type : Range

Text Areas : PlainText

Possible Answers :

10 to 12

Question Number : 23 Question Id : 7155052486 Question Type : SA Calculator : None

Response Time : N.A Think Time : N.A Minimum Instruction Time : 0

Correct Marks : 4 Wrong Marks : 1

$(1+x^2-x^4)^{12} = \sum_{n=0}^{48} a_n x^n$ అనుకోండి. అప్పుడు $a_0 + a_2 + a_4 + \dots + a_{44} =$ _____.

Response Type : Numeric

Evaluation Required For SA : Yes

Show Word Count : Yes

Answers Type : Range

Text Areas : PlainText

Possible Answers :

10 to 12

Question Number : 24 Question Id : 7155052487 Question Type : SA Calculator : None

Response Time : N.A Think Time : N.A Minimum Instruction Time : 0

Correct Marks : 4 Wrong Marks : 1

If S_n denotes the sum of first n terms of the series $7 + 10 + 16 + 25 + 37 + \dots$, then $S_{30} - S_{20}$ is equal to _____.

Response Type : Numeric

Evaluation Required For SA : Yes

Show Word Count : Yes

Answers Type : Range

Text Areas : PlainText

Possible Answers :

10 to 12

Question Number : 24 **Question Id :** 7155052487 **Question Type :** SA **Calculator :** None

Response Time : N.A **Think Time :** N.A **Minimum Instruction Time :** 0

Correct Marks : 4 **Wrong Marks :** 1

$7 + 10 + 16 + 25 + 37 + \dots$, శ్రేణిలోని మొదటి n పదాల మొత్తాన్ని S_n సూచిస్తే, $S_{30} - S_{20} =$ _____.

Response Type : Numeric

Evaluation Required For SA : Yes

Show Word Count : Yes

Answers Type : Range

Text Areas : PlainText

Possible Answers :

10 to 12

Question Number : 25 **Question Id :** 7155052488 **Question Type :** SA **Calculator :** None

Response Time : N.A **Think Time :** N.A **Minimum Instruction Time :** 0

Correct Marks : 4 **Wrong Marks :** 1

If $[t]$ denotes the greatest integer $\leq t$, then the number of points, at which the function

$f(x) = \left[x + x^3 \right] + \left| x - x^3 \right| + \left| x + \frac{1}{2} \right|$ is not differentiable in the open interval $(-10, 10)$, is _____.

Response Type : Numeric

Evaluation Required For SA : Yes

Show Word Count : Yes

Answers Type : Range

Text Areas : PlainText

Possible Answers :

10 to 12

Question Number : 25 Question Id : 7155052488 Question Type : SA Calculator : None

Response Time : N.A Think Time : N.A Minimum Instruction Time : 0

Correct Marks : 4 Wrong Marks : 1

t ను దాటని గరిష్ఠ పూర్ణాంకం [t] అయితే, (-10, 10) అంతరంలో $f(x) = [x+x^3] + |x-x^3| + \left|x + \frac{1}{2}\right|$ ప్రమేయం,

అవకలనం చెందని బిందువుల సంఖ్య = _____.

Response Type : Numeric

Evaluation Required For SA : Yes

Show Word Count : Yes

Answers Type : Range

Text Areas : PlainText

Possible Answers :

10 to 12

Question Number : 26 Question Id : 7155052489 Question Type : SA Calculator : None

Response Time : N.A Think Time : N.A Minimum Instruction Time : 0

Correct Marks : 4 Wrong Marks : 1

If $\int \frac{dx}{(3x^2+5)\sqrt{10x^2+7}} = -\frac{1}{\sqrt{580}} \log_e |f(x)| + C$ where C is an arbitrary constant, then $f(0)$ is equal to

Response Type : Numeric

Evaluation Required For SA : Yes

Show Word Count : Yes

Answers Type : Range

Text Areas : PlainText

Possible Answers :

10 to 12

Question Number : 26 Question Id : 7155052489 Question Type : SA Calculator : None

Response Time : N.A Think Time : N.A Minimum Instruction Time : 0

Correct Marks : 4 Wrong Marks : 1

$$\int \frac{dx}{(3x^2+5)\sqrt{10x^2+7}} = -\frac{1}{\sqrt{580}} \log_e |f(x)| + C, \text{ ఇక్కడ } C \text{ ఒక యాదృచ్ఛిక స్థిరాంకం అయితే, } f(0) = \underline{\hspace{2cm}}.$$

Response Type : Numeric

Evaluation Required For SA : Yes

Show Word Count : Yes

Answers Type : Range

Text Areas : PlainText

Possible Answers :

10 to 12

Question Number : 27 Question Id : 7155052490 Question Type : SA Calculator : None

Response Time : N.A Think Time : N.A Minimum Instruction Time : 0

Correct Marks : 4 Wrong Marks : 1

Let the equation of the hyperbola with foci $(1, 5)$, $(1, -1)$ and eccentricity $\sqrt{3}$ be $x^2 - 2y^2 + ax + by + c = 0$. Then $|a + b + c|$ is equal to _____.

Response Type : Numeric

Evaluation Required For SA : Yes

Show Word Count : Yes

Answers Type : Range

Text Areas : PlainText

Possible Answers :

10 to 12

Question Number : 27 Question Id : 7155052490 Question Type : SA Calculator : None

Response Time : N.A Think Time : N.A Minimum Instruction Time : 0

Correct Marks : 4 Wrong Marks : 1

(1, 5), (1, -1) నాభులుగా మరియు ఉత్కేంద్రత $\sqrt{3}$ గా కలిగిన అతిపరావలయ సమీకరణం $x^2 - 2y^2 + ax + by + c = 0$. అనుకోండి. అప్పుడు $|a + b + c| = \underline{\hspace{2cm}}$.

Response Type : Numeric

Evaluation Required For SA : Yes

Show Word Count : Yes

Answers Type : Range

Text Areas : PlainText

Possible Answers :

10 to 12

Question Number : 28 **Question Id :** 7155052491 **Question Type :** SA **Calculator :** None

Response Time : N.A **Think Time :** N.A **Minimum Instruction Time :** 0

Correct Marks : 4 **Wrong Marks :** 1

Let α_1, α_2 be the values of a such that the distance between the point (2, 4, 3) and the plane $3x + y + az + 10 = 0$ is $\sqrt{35}$ units. Then the area of the triangle with vertices $(\alpha_1, \alpha_2, 0)$, $(\alpha_2, \alpha_1, 0)$ and $\left(\frac{164}{13}, 5, 0\right)$ is $\underline{\hspace{2cm}}$ unit².

Response Type : Numeric

Evaluation Required For SA : Yes

Show Word Count : Yes

Answers Type : Range

Text Areas : PlainText

Possible Answers :

10 to 12

Question Number : 28 **Question Id :** 7155052491 **Question Type :** SA **Calculator :** None

Response Time : N.A **Think Time :** N.A **Minimum Instruction Time :** 0

Correct Marks : 4 **Wrong Marks :** 1

(2, 4, 3) బిందువు మరియు $3x + y + az + 10 = 0$ తలం మధ్యదూరం $\sqrt{35}$ యూనిట్లు అయ్యేలా a యొక్క విలువలు α_1, α_2 అనుకోండి. అప్పుడు $(\alpha_1, \alpha_2, 0)$, $(\alpha_2, \alpha_1, 0)$ మరియు $\left(\frac{164}{13}, 5, 0\right)$ లు శీర్షాలుగా కలిగిన త్రిభుజ వైశాల్యం = $\underline{\hspace{2cm}}$ యూనిట్² లలో.

Response Type : Numeric

Evaluation Required For SA : Yes

Show Word Count : Yes

Answers Type : Range

Text Areas : PlainText

Possible Answers :

10 to 12

Question Number : 29 **Question Id :** 7155052492 **Question Type :** SA **Calculator :** None

Response Time : N.A **Think Time :** N.A **Minimum Instruction Time :** 0

Correct Marks : 4 **Wrong Marks :** 1

Let O be the origin and let the vectors $\overline{OA} = -3\hat{i} + 7\hat{j} + 5\hat{k}$, $\overline{OB} = -5\hat{i} + 7\hat{j} - 3\hat{k}$ and $\overline{OC} = \hat{u}$ represent three sides of a parallelepiped, where \hat{u} is a unit vector in the xy - plane. If the maximum volume of the parallelepiped is $2\sqrt{\alpha}$, then α is equal to _____.

Response Type : Numeric

Evaluation Required For SA : Yes

Show Word Count : Yes

Answers Type : Range

Text Areas : PlainText

Possible Answers :

10 to 12

Question Number : 29 **Question Id :** 7155052492 **Question Type :** SA **Calculator :** None

Response Time : N.A **Think Time :** N.A **Minimum Instruction Time :** 0

Correct Marks : 4 **Wrong Marks :** 1

O మూలబిందువుగా, \hat{u} అనేది ఒక xy తలంలో ప్రమాణ సదిశ అయి, సమాంతర చతుర్భుజి యొక్క మూడు భుజాలు $\overline{OA} = -3\hat{i} + 7\hat{j} + 5\hat{k}$, $\overline{OB} = -5\hat{i} + 7\hat{j} - 3\hat{k}$ భుజాలు మరియు $\overline{OC} = \hat{u}$ సదిశలు అనుకోండి. సమాంతర చతుర్భుజి గరిష్ఠ ఘన పరిమాణం $2\sqrt{\alpha}$ అయితే, $\alpha =$ _____.

Response Type : Numeric

Evaluation Required For SA : Yes

Show Word Count : Yes

Answers Type : Range

Text Areas : PlainText

Possible Answers :

10 to 12

Question Number : 30 **Question Id :** 7155052493 **Question Type :** SA **Calculator :** None

Response Time : N.A **Think Time :** N.A **Minimum Instruction Time :** 0

Correct Marks : 4 **Wrong Marks :** 1

If the solution curve of the differential equation $\frac{x+y-2}{x+y-1} \frac{dy}{dx} = \frac{x+y+2}{x+y+1}$, $x+y > 2$ passes through the

points $(\sqrt{2}, \sqrt{2})$ and $(2, \alpha)$, then $2\alpha - \log_e \left(\frac{\alpha^2 + 4\alpha + 2}{6} \right)$ is equal to _____ .

Response Type : Numeric

Evaluation Required For SA : Yes

Show Word Count : Yes

Answers Type : Range

Text Areas : PlainText

Possible Answers :

10 to 12

Question Number : 30 **Question Id :** 7155052493 **Question Type :** SA **Calculator :** None

Response Time : N.A **Think Time :** N.A **Minimum Instruction Time :** 0

Correct Marks : 4 **Wrong Marks :** 1

$\frac{x+y-2}{x+y-1} \frac{dy}{dx} = \frac{x+y+2}{x+y+1}$, $x+y > 2$ అవకలన సమీకరణ సాధన $(\sqrt{2}, \sqrt{2})$ మరియు $(2, \alpha)$ బిందువుల

గుండా పోతుంటే $2\alpha - \log_e \left(\frac{\alpha^2 + 4\alpha + 2}{6} \right) =$ _____ .

Response Type : Numeric

Evaluation Required For SA : Yes

Show Word Count : Yes

Answers Type : Range

Text Areas : PlainText

Possible Answers :

10 to 12

Aptitude Test

Section Id :	715505157
Section Number :	3
Section type :	Online
Mandatory or Optional :	Mandatory
Number of Questions :	50
Number of Questions to be attempted :	50
Section Marks :	200
Enable Mark as Answered Mark for Review and Clear Response :	Yes
Maximum Instruction Time :	0
Sub-Section Number :	1
Sub-Section Id :	715505157
Question Shuffling Allowed :	Yes
Is Section Default? :	null

Question Number : 31 Question Id : 7155052494 Question Type : MCQ Option Shuffling : Yes Is Question Mandatory : No Calculator : None Response Time : N.A Think Time : N.A Minimum Instruction Time : 0

Correct Marks : 4 Wrong Marks : 1

Adobe is a

Options :

7155057781. Type of cement

7155057782. Type of floor finish

7155057783. Type of paint

7155057784. Type of Brick

Question Number : 31 Question Id : 7155052494 Question Type : MCQ Option Shuffling : Yes Is Question Mandatory : No Calculator : None Response Time : N.A Think Time : N.A Minimum Instruction Time : 0

Correct Marks : 4 Wrong Marks : 1

అడోబ్ అనేది :

Options :

7155057781. సిమెంట్ రకం

7155057782. నేల పూరించు రకం

7155057783. పెయింట్ రకం

7155057784. ఇటుక రకం

Question Number : 32 Question Id : 7155052495 Question Type : MCQ Option Shuffling : Yes Is Question Mandatory : No Calculator : None Response Time : N.A Think Time : N.A Minimum Instruction Time : 0

Correct Marks : 4 Wrong Marks : 1

Given below are two statements:

Statement I : Chandigarh is the first planned city of Independent India

Statement II : Chandigarh city was designed by Swiss French architect Le Corbusier

In the light of above statements, choose the **most appropriate** answer form the options given below

Options :

7155057785. Both Statement I and Statement II are correct

7155057786. Both Statement I and Statement II are incorrect

7155057787. Statement I is correct but statement II is incorrect

7155057788. Statement I is incorrect but statement II is correct

Question Number : 32 Question Id : 7155052495 Question Type : MCQ Option Shuffling : Yes Is Question Mandatory : No Calculator : None Response Time : N.A Think Time : N.A Minimum Instruction Time : 0

Correct Marks : 4 Wrong Marks : 1

కింది రెండు ప్రకటనలు

ప్రకటన I : స్వతంత్ర భారత మొదటి ప్రణాళిక చేయబడిన పట్టణం చండిఘడ్.

ప్రకటన II : చండిఘడ్ పట్టణం స్విస్ ఫ్రెంచ్ నిర్మాణ కర్త లీ కార్పొరేషన్ చే రూపకల్పన చేయబడింది.

పై ప్రకటనల ఆధారంగా సముచిత జవాబు ఎన్నుకోండి.

Options :

7155057785. ప్రకటన I మరియు ప్రకటన II రెండూ నిజం

7155057786. ప్రకటన I మరియు ప్రకటన II రెండూ అబద్ధం

7155057787. ప్రకటన I నిజం కాని ప్రకటన II అబద్ధం

7155057788. ప్రకటన I అబద్ధం కాని ప్రకటన II నిజం

Question Number : 33 Question Id : 7155052496 Question Type : MCQ Option Shuffling : Yes Is Question Mandatory : No Calculator : None Response Time : N.A Think Time : N.A Minimum

Instruction Time : 0

Correct Marks : 4 Wrong Marks : 1

Given below are two statements:

Statement I : Glass has low thermal conductivity

Statement II : Glass can absorb, refract and transmit light.

In the light of above statements, choose the most appropriate answer form the options given below

Options :

7155057789. Both Statement I and Statement II are correct

7155057790. Both Statement I and Statement II are incorrect

7155057791. Statement I is correct but statement II is incorrect

7155057792. Statement I is incorrect but statement II is correct

Question Number : 33 Question Id : 7155052496 Question Type : MCQ Option Shuffling : Yes Is

Question Mandatory : No Calculator : None Response Time : N.A Think Time : N.A Minimum

Instruction Time : 0

Correct Marks : 4 Wrong Marks : 1

రెండు ప్రకటనలు

ప్రకటన I : గాజు తక్కువ ఉష్ణ వాహకత్వం కలిగి ఉంటుంది.

ప్రకటన II : గాజు కాంతిని శోషణ, వక్రీభవన మరియు రవాణా చేయగలదు

పై ప్రకటనల ఆధారంగా సముచిత జవాబు ఎన్నుకోండి.

Options :

7155057789. ప్రకటన I మరియు ప్రకటన II రెండూ నిజం

7155057790. ప్రకటన I మరియు ప్రకటన II రెండూ అబద్ధం

7155057791. ప్రకటన I నిజం కాని ప్రకటన II అబద్ధం

7155057792. ప్రకటన I అబద్ధం కాని ప్రకటన II నిజం

Question Number : 34 Question Id : 7155052497 Question Type : MCQ Option Shuffling : Yes Is Question Mandatory : No Calculator : None Response Time : N.A Think Time : N.A Minimum Instruction Time : 0

Correct Marks : 4 Wrong Marks : 1

Match List I with List II

LIST I		LIST II	
A.	PMUY	I.	KAUSHAL VISKAS YOJNA
B.	PMAY	II.	JAN DHAN YOJANA
C.	PMKVY	III.	UJJWALA YOJANA
D.	PMJDY	IV.	AWAS YOJANA

Choose the correct answer from the options given below:

Options :

7155057793. A-I, B-III, C-II, D-IV

7155057794. A-III, B-IV, C-I, D-II

7155057795. A-IV, B-II, C-III, D-I

7155057796. A-IV, B-III, C-I, D-II

Question Number : 34 Question Id : 7155052497 Question Type : MCQ Option Shuffling : Yes Is Question Mandatory : No Calculator : None Response Time : N.A Think Time : N.A Minimum Instruction Time : 0

Correct Marks : 4 Wrong Marks : 1

జతపరచండి

జాబితా I		జాబితా II	
A.	PMUY	I.	కౌశల్ వికాస్ యోజన
B.	PMAY	II.	జన్ ధన్ యోజన
C.	PMKVY	III.	ఉజ్వల యోజన
D.	PMJDY	IV.	ఆవాస్ యోజన

సరైన జవాబు ఎన్నుకోండి

Options :

7155057793. A-I, B-III, C-II, D-IV

7155057794. A-III, B-IV, C-I, D-II

7155057795. A-IV, B-II, C-III, D-I

7155057796. A-IV, B-III, C-I, D-II

Question Number : 35 Question Id : 7155052498 Question Type : MCQ Option Shuffling : Yes Is

Question Mandatory : No Calculator : None Response Time : N.A Think Time : N.A Minimum

Instruction Time : 0

Correct Marks : 4 Wrong Marks : 1

Match List I with List II

LIST I		LIST II	
A.	CP Kukreja	I.	IIM Ahmedabad
B.	Louis I Kahn	II.	Jawahar Lal Nehru University
C.	B.V Doshi	III.	IIT Kanpur
D.	Achyut Kanvinde	IV.	IIM Bengaluru

Choose the correct answer from the options given below:

Options :

7155057797. A-IV, B-II, C-I, D-III

7155057798. A-III, B-I, C-II, D-IV

7155057799. A-II, B-I, C-IV, D-III

7155057800. A-I, B-IV, C-III, D-II

Question Number : 35 Question Id : 7155052498 Question Type : MCQ Option Shuffling : Yes Is Question Mandatory : No Calculator : None Response Time : N.A Think Time : N.A Minimum Instruction Time : 0

Correct Marks : 4 Wrong Marks : 1

జతపరచండి

జాబితా I		జాబితా II	
A.	CP కుక్రేజా	I.	IIM అహ్మదాబాద్
B.	లూయిస్ కహన్	II.	జవహర్ లాల్ నెహ్రూ యూనివర్సిటీ
C.	B.V దోషి	III.	IIT ఖాన్పూర్
D.	అచ్యుత్ కన్విండే	IV.	IIM బెంగళూరు

సరైన జవాబు ఎన్నుకోండి.

Options :

7155057797. A-IV, B-II, C-I, D-III

7155057798. A-III, B-I, C-II, D-IV

7155057799. A-II, B-I, C-IV, D-III

7155057800. A-I, B-IV, C-III, D-II

Question Number : 36 Question Id : 7155052499 Question Type : MCQ Option Shuffling : Yes Is Question Mandatory : No Calculator : None Response Time : N.A Think Time : N.A Minimum Instruction Time : 0

Correct Marks : 4 Wrong Marks : 1

Which one of these is not a complimentary colour?

Options :

7155057801. Blue-Orange

7155057802. Red-Green

7155057803. Blue-Green

7155057804. Violet-Yellow

Question Number : 36 Question Id : 7155052499 Question Type : MCQ Option Shuffling : Yes Is Question Mandatory : No Calculator : None Response Time : N.A Think Time : N.A Minimum Instruction Time : 0

Correct Marks : 4 Wrong Marks : 1

క్రింది వాటిలో ఏది పూరక వర్ణం కాదు?

Options :

7155057801. నీలం-నారింజ

7155057802. ఎరుపు-ఆకుపచ్చ

7155057803. నీలం-ఆకుపచ్చ

7155057804. అతినీలలోహిత-పసుపు

Question Number : 37 Question Id : 7155052500 Question Type : MCQ Option Shuffling : Yes Is Question Mandatory : No Calculator : None Response Time : N.A Think Time : N.A Minimum Instruction Time : 0

Correct Marks : 4 Wrong Marks : 1

In which State of India, Robbers cave is situated:

Options :

7155057805. Himachal Pradesh

7155057806. Uttarakhand

7155057807. Uttar Pradesh

7155057808. Madhya Pradesh

Question Number : 37 Question Id : 7155052500 Question Type : MCQ Option Shuffling : Yes Is Question Mandatory : No Calculator : None Response Time : N.A Think Time : N.A Minimum Instruction Time : 0

Correct Marks : 4 Wrong Marks : 1

రాబర్స్ కేవ్ భారత ఏ రాష్ట్రంలో ఉంది?

Options :

7155057805. హిమాచల్ ప్రదేశ్

7155057806. ఉత్తరాఖండ్

7155057807. ఉత్తర్ ప్రదేశ్

7155057808. మధ్య ప్రదేశ్

Question Number : 38 Question Id : 7155052501 Question Type : MCQ Option Shuffling : Yes Is Question Mandatory : No Calculator : None Response Time : N.A Think Time : N.A Minimum Instruction Time : 0

Correct Marks : 4 Wrong Marks : 1

Choose the correct option among the following:

Petronas Tower is situated in:

Options :

7155057809. Paris

7155057810. Dubai

7155057811. Kuala Lumpur

7155057812. New York

Question Number : 38 Question Id : 7155052501 Question Type : MCQ Option Shuffling : Yes Is Question Mandatory : No Calculator : None Response Time : N.A Think Time : N.A Minimum Instruction Time : 0

Correct Marks : 4 Wrong Marks : 1

కింది వాటిలో సరైన జవాబు ఎన్నుకోండి.

పెట్రోనస్ టవర్ ఎక్కడ ఉంది?

Options :

7155057809. పారిస్

7155057810. దుబాయ్

7155057811. కౌలా లంపూర్

7155057812. న్యూయార్క్

Question Number : 39 Question Id : 7155052502 Question Type : MCQ Option Shuffling : Yes Is Question Mandatory : No Calculator : None Response Time : N.A Think Time : N.A Minimum Instruction Time : 0

Correct Marks : 4 Wrong Marks : 1

The Konark Temple is located in which state?

Options :

7155057813. Madhya Pradesh

7155057814. Odisha

7155057815. Karnataka

7155057816. Rajasthan

Question Number : 39 Question Id : 7155052502 Question Type : MCQ Option Shuffling : Yes Is Question Mandatory : No Calculator : None Response Time : N.A Think Time : N.A Minimum Instruction Time : 0

Correct Marks : 4 Wrong Marks : 1

కోణార్క గుడి ఏ రాష్ట్రంలో ఉంది?

Options :

7155057813. మధ్య ప్రదేశ్

7155057814. ఒడిస్సా

7155057815. కర్ణాటక

7155057816. రాజస్థాన్

Question Number : 40 Question Id : 7155052503 Question Type : MCQ Option Shuffling : Yes Is Question Mandatory : No Calculator : None Response Time : N.A Think Time : N.A Minimum Instruction Time : 0

Correct Marks : 4 Wrong Marks : 1

Who is the architect of the Lotus Temple?

Options :

7155057817. Louis I Kahn

7155057818. Mohse Safdi

7155057819. Fariborz Sahba

7155057820. Richard Meyer

Question Number : 40 Question Id : 7155052503 Question Type : MCQ Option Shuffling : Yes Is

Question Mandatory : No Calculator : None Response Time : N.A Think Time : N.A Minimum

Instruction Time : 0

Correct Marks : 4 Wrong Marks : 1

లోటస్ టెంపుల్ యొక్క నిర్మాణ కర్త ఎవరు?

Options :

7155057817. లూయిస్ ఐ కహాన్

7155057818. మొహసే సఫ్డి

7155057819. ఫరిబోర్క్ సహదా

7155057820. రిచర్డ్ మేయర్

Question Number : 41 Question Id : 7155052504 Question Type : MCQ Option Shuffling : Yes Is

Question Mandatory : No Calculator : None Response Time : N.A Think Time : N.A Minimum

Instruction Time : 0

Correct Marks : 4 Wrong Marks : 1

A small lift for carrying only a small load is known as:

Options :

7155057821. A dead Bearer

7155057822. A Dumb Waiter

7155057823. A Jockey Boy

7155057824. A push upper

Question Number : 41 Question Id : 7155052504 Question Type : MCQ Option Shuffling : Yes Is Question Mandatory : No Calculator : None Response Time : N.A Think Time : N.A Minimum Instruction Time : 0

Correct Marks : 4 Wrong Marks : 1

చిన్న బరువులను మాత్రమే మోయడానికి వాడు చిన్న లిఫ్ట్‌ని ఏమంటారు?

Options :

7155057821. డెడ్ బేయర్

7155057822. డంబ్ వెయిటర్

7155057823. జాకీ బాయ్

7155057824. పుష్ అప్పర్

Question Number : 42 Question Id : 7155052505 Question Type : MCQ Option Shuffling : Yes Is Question Mandatory : No Calculator : None Response Time : N.A Think Time : N.A Minimum Instruction Time : 0

Correct Marks : 4 Wrong Marks : 1

Which are often referred as 'twin cities' of Odisha?

Options :

7155057825. Bhubaneshwar-Puri

7155057826. Puri-Cuttack

7155057827. Bhubaneshwar-Cuttack

7155057828. Bhubaneshwar-Rourkela

Question Number : 42 Question Id : 7155052505 Question Type : MCQ Option Shuffling : Yes Is Question Mandatory : No Calculator : None Response Time : N.A Think Time : N.A Minimum Instruction Time : 0

Correct Marks : 4 Wrong Marks : 1

ఒడిస్సా 'జంట నగరాలు' ani వేటిని అంటారు ?

Options :

7155057825. భువనేశ్వర్-పూరి

7155057826. పూరి-కటక్

7155057827. భువనేశ్వర్-కటక్

7155057828. భువనేశ్వర్-రుర్కెల

Question Number : 43 Question Id : 7155052506 Question Type : MCQ Option Shuffling : Yes Is Question Mandatory : No Calculator : None Response Time : N.A Think Time : N.A Minimum Instruction Time : 0

Correct Marks : 4 Wrong Marks : 1

Which is the correct chronology of Human Civilizations in terms of their existence?

Options :

7155057829. Mesopotamia-Harappa-Egyptian-Chinese

7155057830. Mesopotamia-Egyptian-Harappa-Chinese

7155057831. Mesopotamia-Chinese-Harappa-Egyptian

7155057832. Egyptian-Mesopotamia-Harappa-Sumerian

Question Number : 43 Question Id : 7155052506 Question Type : MCQ Option Shuffling : Yes Is Question Mandatory : No Calculator : None Response Time : N.A Think Time : N.A Minimum Instruction Time : 0

Correct Marks : 4 Wrong Marks : 1

మానవ నాగరికత వాటి వ్యవస్థితం ఆధారంగా సరైన కాలక్రమానుగతం ఏది?

Options :

7155057829. మెసపటోమియా-హరప్పా-ఈజిప్షియన్-చైనీస్

7155057830. మెసపటోమియా-ఈజిప్షియన్-హరప్పా-చైనీస్

7155057831. మెసపటోమియా-చైనీస్-హరప్పా-ఈజిప్షియన్

7155057832. ఈజిప్షియన్-మెసపటోమియా-హరప్పా-సుమేరియన్

Question Number : 44 Question Id : 7155052507 Question Type : MCQ Option Shuffling : Yes Is Question Mandatory : No Calculator : None Response Time : N.A Think Time : N.A Minimum Instruction Time : 0

Correct Marks : 4 Wrong Marks : 1

Qutub-Minar in Delhi was built by:

Options :

7155057833. Shah Jahan

7155057834. Jahangir

7155057835. Akbar

7155057836. Qutub ud-din Aibak

Question Number : 44 Question Id : 7155052507 Question Type : MCQ Option Shuffling : Yes Is

Question Mandatory : No Calculator : None Response Time : N.A Think Time : N.A Minimum

Instruction Time : 0

Correct Marks : 4 Wrong Marks : 1

డిల్లీలోని కుతుబ్ మినార్ ఎవరు నిర్మించారు?

Options :

7155057833. షా జహాన్

7155057834. జహంగీర్

7155057835. అక్బర్

7155057836. కుతుబ్ ఉద్దీన్ ఐబక్

Question Number : 45 Question Id : 7155052508 Question Type : MCQ Option Shuffling : Yes Is

Question Mandatory : No Calculator : None Response Time : N.A Think Time : N.A Minimum

Instruction Time : 0

Correct Marks : 4 Wrong Marks : 1

Which direction in the southern hemisphere would you get glare free (diffused) light throughout the year?

Options :

7155057837. North

7155057838. South

7155057839. East

7155057840. West

Question Number : 45 Question Id : 7155052508 Question Type : MCQ Option Shuffling : Yes Is

Question Mandatory : No Calculator : None Response Time : N.A Think Time : N.A Minimum

Instruction Time : 0

Correct Marks : 4 Wrong Marks : 1

దక్షిణ అర్ధగోళంలో మిరమిట్లు గొలపని (వ్యాపించిన) కాంతి సంవత్సరం మొత్తంగా ఏ దిశలో మనకు వస్తుంది?

Options :

7155057837. ఉత్తరం

7155057838. దక్షిణం

7155057839. తూర్పు

7155057840. పడమర

Question Number : 46 Question Id : 7155052509 Question Type : MCQ Option Shuffling : Yes Is

Question Mandatory : No Calculator : None Response Time : N.A Think Time : N.A Minimum

Instruction Time : 0

Correct Marks : 4 Wrong Marks : 1

Who is the architect of the famous "Jawaharlal Kala Complex" in Jaipur?

Options :

7155057841. Raj Rewal

7155057842. Charles Correa

7155057843. Achyut Kanvinde

7155057844. Hafeez Contractor

Question Number : 46 Question Id : 7155052509 Question Type : MCQ Option Shuffling : Yes Is

Question Mandatory : No Calculator : None Response Time : N.A Think Time : N.A Minimum

Instruction Time : 0

Correct Marks : 4 Wrong Marks : 1

జైపూర్ లోని "జవహర్‌లాల్ కళా కాంప్లెక్స్" నిర్మాణ కర్త ఎవరు?

Options :

7155057841. రాజ్ రేవల్

7155057842. చార్లెస్ కొరియా

7155057843. అచ్యుత్ కన్విండే

7155057844. హఫీజ్ కాంట్రాక్టర్

Question Number : 47 Question Id : 7155052510 Question Type : MCQ Option Shuffling : Yes Is Question Mandatory : No Calculator : None Response Time : N.A Think Time : N.A Minimum Instruction Time : 0

Correct Marks : 4 Wrong Marks : 1

Dhajji-Dewari is a construction style popular predominantly in _____.

Options :

7155057845. Coastal Areas

7155057846. Plains

7155057847. Mountainous Region

7155057848. Desert Areas

Question Number : 47 Question Id : 7155052510 Question Type : MCQ Option Shuffling : Yes Is Question Mandatory : No Calculator : None Response Time : N.A Think Time : N.A Minimum Instruction Time : 0

Correct Marks : 4 Wrong Marks : 1

ఎక్కడ ధబ్జి-దేవరి అను నిర్మాణ శైలి ప్రబలంగా ప్రసిద్ధి.

Options :

7155057845. సముద్ర తీరాలలో

7155057846. మైదానాలలో

7155057847. పర్వత ప్రాంతాలలో

7155057848. ఎడారులలో

Question Number : 48 Question Id : 7155052511 Question Type : MCQ Option Shuffling : Yes Is Question Mandatory : No Calculator : None Response Time : N.A Think Time : N.A Minimum Instruction Time : 0

Correct Marks : 4 Wrong Marks : 1

Which stone is used for roofing in mountainous regions?

Options :

7155057849. Marble

7155057850. Granite

7155057851. Shale

7155057852. Sand Stone

Question Number : 48 Question Id : 7155052511 Question Type : MCQ Option Shuffling : Yes Is Question Mandatory : No Calculator : None Response Time : N.A Think Time : N.A Minimum Instruction Time : 0

Correct Marks : 4 Wrong Marks : 1

పర్వత ప్రాంతాలలో పై కప్పును వాడు రాయి ఏది?

Options :

7155057849. పాలరాయి

7155057850. నల్లశాణపు / గ్రానైట్ రాయి

7155057851. బంక మట్టి రాయి

7155057852. ఇసుక రాయి

Question Number : 49 Question Id : 7155052512 Question Type : MCQ Option Shuffling : Yes Is Question Mandatory : No Calculator : None Response Time : N.A Think Time : N.A Minimum Instruction Time : 0

Correct Marks : 4 Wrong Marks : 1

Chandigarh is an example of which type of city planning.

Options :

7155057853. Radio Centric

7155057854. Grid-iron

7155057855. Linear

7155057856. Organic

Question Number : 49 Question Id : 7155052512 Question Type : MCQ Option Shuffling : Yes Is Question Mandatory : No Calculator : None Response Time : N.A Think Time : N.A Minimum Instruction Time : 0

Correct Marks : 4 Wrong Marks : 1

చండిఘడ్ ఏ రకం పట్టణ ప్రణాళిక ఉదాహరణ

Options :

7155057853. రేడియో-సెంట్రల్

7155057854. గ్రీడ్-ఐరన్

7155057855. లీనియర్

7155057856. ఆర్గానిక్

Question Number : 50 Question Id : 7155052513 Question Type : MCQ Option Shuffling : Yes Is Question Mandatory : No Calculator : None Response Time : N.A Think Time : N.A Minimum Instruction Time : 0

Correct Marks : 4 Wrong Marks : 1

If you have to build on the seashore in Goa, which rooms would have the best view of the sea?

Options :

7155057857. Those facing North

7155057858. Those facing South

7155057859. Those facing East

7155057860. Those facing West

Question Number : 50 Question Id : 7155052513 Question Type : MCQ Option Shuffling : Yes Is Question Mandatory : No Calculator : None Response Time : N.A Think Time : N.A Minimum Instruction Time : 0

Correct Marks : 4 Wrong Marks : 1

మీరు గోవా సముద్రతీరంలో నిర్మించాలనుకుంటే, ఏ గదులు అత్యుత్తమ సముద్ర వీక్షణం కలిగి ఉంటాయి?

Options :

7155057857. ఉత్తరం చూస్తున్నది

7155057858. దక్షిణం చూస్తున్నది

7155057859. తూర్పు చూస్తున్నది

7155057860. పడమర చూస్తున్నది

Question Number : 51 Question Id : 7155052514 Question Type : MCQ Option Shuffling : Yes Is Question Mandatory : No Calculator : None Response Time : N.A Think Time : N.A Minimum Instruction Time : 0

Correct Marks : 4 Wrong Marks : 1

"NIFT" National Institute of Fashion Technology, Delhi is designed by

Options :

7155057861. B.V Doshi

7155057862. C.P Kukreja

7155057863. Raj Rewal

7155057864. Bimal Patel

Question Number : 51 Question Id : 7155052514 Question Type : MCQ Option Shuffling : Yes Is Question Mandatory : No Calculator : None Response Time : N.A Think Time : N.A Minimum Instruction Time : 0

Correct Marks : 4 Wrong Marks : 1

"NIFT" నేషనల్ ఇన్స్టిట్యూట్ ఆఫ్ ఫాషన్ టెక్నాలజీ, ఢిల్లీ ఎవరు రూపకల్పన చేసారు?

Options :

7155057861. బి.వి దోషి

7155057862. సి.పి. కుక్రేజా

7155057863. రాజ్ రేవల్

7155057864. బిమల్ పశుల్





Question Number : 52 Question Id : 7155052515 Question Type : MCQ Option Shuffling : Yes Is

Question Mandatory : No Calculator : None Response Time : N.A Think Time : N.A Minimum

Instruction Time : 0

Correct Marks : 4 Wrong Marks : 1

Match List I with List II

LIST I		LIST II	
A.		I.	Empire state Building
B.		II.	Hagia Sophia
C.		III.	Sydney Opera House
D.		IV.	Colosseum

Choose the correct answer from the options given below:

Options :

7155057865. A-II, B-I, C-IV, D-III

7155057866. A-I, B-III, C-IV, D-II





7155057867. A-I, B-II, C-III, D-IV

7155057868. A-IV, B-III, C-II, D-I

Question Number : 52 Question Id : 7155052515 Question Type : MCQ Option Shuffling : Yes Is Question Mandatory : No Calculator : None Response Time : N.A Think Time : N.A Minimum Instruction Time : 0

Correct Marks : 4 Wrong Marks : 1

జతపరచండి

	జాబితా I		జాబితా II
A.		I.	ఎంపైర్ స్టేట్ బిల్డింగ్
B.		II.	హగియా సోఫియా
C.		III.	సిడ్నీ ఓపెరా హౌస్
D.		IV.	కొలోసియమ్

సరైన జవాబు ఎన్నుకోండి :

Options :

7155057865. A-II, B-I, C-IV, D-III





7155057866. A-I, B-III, C-IV, D-II

7155057867. A-I, B-II, C-III, D-IV

7155057868. A-IV, B-III, C-II, D-I

Question Number : 53 Question Id : 7155052516 Question Type : MCQ Option Shuffling : Yes Is Question Mandatory : No Calculator : None Response Time : N.A Think Time : N.A Minimum Instruction Time : 0

Correct Marks : 4 Wrong Marks : 1
Match List I with List II

LIST I		LIST II	
A.		I.	Tesla
B.		II.	Ferrari
C.		III.	Porsche
D.		IV.	Toyota

Choose the correct answer from the options given below:

Options :

7155057869. A-IV, B-I, C-II, D-III

7155057870. A-II, B-III, C-I, D-IV





7155057871. A-III, B-II, C-I, D-IV

7155057872. A-IV, B-III, C-II, D-I

Question Number : 53 Question Id : 7155052516 Question Type : MCQ Option Shuffling : Yes Is
Question Mandatory : No Calculator : None Response Time : N.A Think Time : N.A Minimum
Instruction Time : 0

Correct Marks : 4 Wrong Marks : 1

జతపరచండి

జాబితా I		జాబితా II	
A.		I.	టెస్లా
B.		II.	ఫెర్రారి
C.		III.	పోర్షె
D.		IV.	టోయోటా

సరైన జవాబు ఎన్నుకోండి

Options :

7155057869. A-III, B-I, C-II, D-IV

7155057870. A-II, B-III, C-I, D-IV

7155057871. A-III, B-II, C-I, D-IV

7155057872. A-IV, B-III, C-II, D-I

Question Number : 54 Question Id : 7155052517 Question Type : MCQ Option Shuffling : Yes Is Question Mandatory : No Calculator : None Response Time : N.A Think Time : N.A Minimum Instruction Time : 0

Correct Marks : 4 Wrong Marks : 1

Given below are two statements:

Statement I : Red, Blue and Yellow are the primary colours of a colour wheel.

Statement II : The colours which are positioned opposite to each other in a colour wheel are known as complementary colours.

In the light of above statements, choose the correct answer form the options given below

Options :

7155057873. Both Statement I and Statement II are correct

7155057874. Both Statement I and Statement II are incorrect

7155057875. Statement I is correct but statement II is incorrect

7155057876. Statement I is incorrect but statement II is correct

Question Number : 54 Question Id : 7155052517 Question Type : MCQ Option Shuffling : Yes Is Question Mandatory : No Calculator : None Response Time : N.A Think Time : N.A Minimum Instruction Time : 0

Correct Marks : 4 Wrong Marks : 1

రెండు ప్రకటనలు

ప్రకటన I : వర్ణ చక్రం యొక్క ప్రధాన రంగులు ఎరుపు, నీలం మరియు పసుపు.

ప్రకటన II : వర్ణ చక్రంలో ఎదురెదురు ఉన్న వర్ణాలను పూరక రంగులు అంటారు.

పై ప్రకటనల ఆధారంగా సరైన జవాబు ఎన్నుకోండి.

Options :

7155057873. ప్రకటన I మరియు ప్రకటన II రెండూ నిజం

7155057874. ప్రకటన I మరియు ప్రకటన II రెండూ అబద్ధం

7155057875. ప్రకటన I నిజం కాని ప్రకటన II అబద్ధం

7155057876. ప్రకటన I అబద్ధం కాని ప్రకటన II నిజం

Question Number : 55 Question Id : 7155052518 Question Type : MCQ Option Shuffling : Yes Is

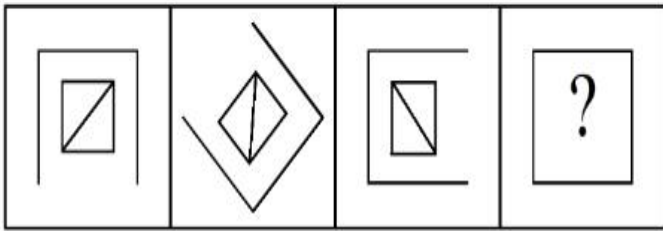
Question Mandatory : No Calculator : None Response Time : N.A Think Time : N.A Minimum

Instruction Time : 0

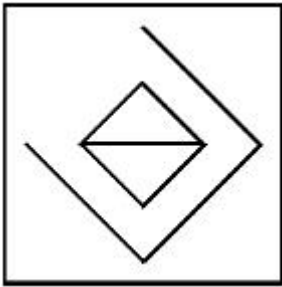
Correct Marks : 4 Wrong Marks : 1

Following question consists of problem figures followed by answer figures. Select a figure from amongst the answer figures which will continue the same series or pattern as established by the problem figures.

PROBLEM FIGURES

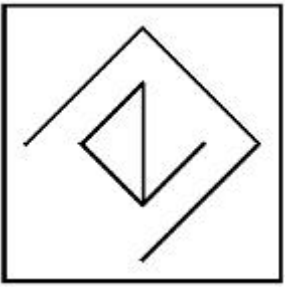


Options :

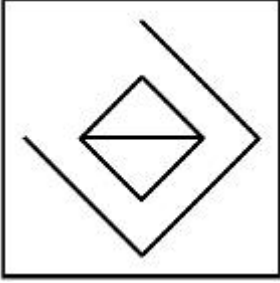


7155057877.

7155057878.



7155057879.



7155057880.

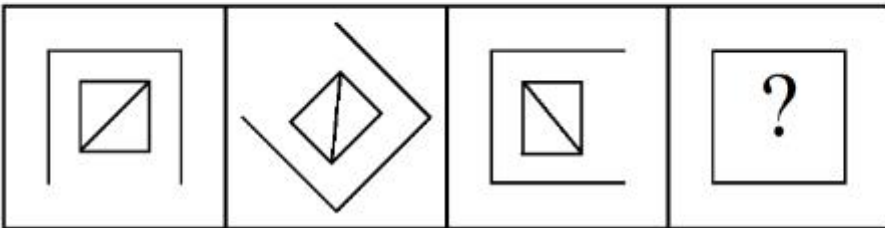


Question Number : 55 Question Id : 7155052518 Question Type : MCQ Option Shuffling : Yes Is Question Mandatory : No Calculator : None Response Time : N.A Think Time : N.A Minimum Instruction Time : 0

Correct Marks : 4 Wrong Marks : 1

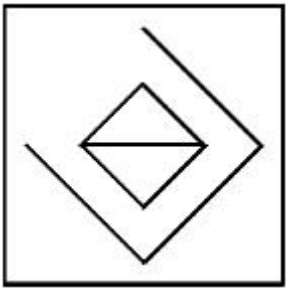
దత్త శ్రేణి లేదా నమూనాని కొనసాగించు చిత్రాన్ని ఎన్నుకోండి

ప్రశ్న చిత్రాలు

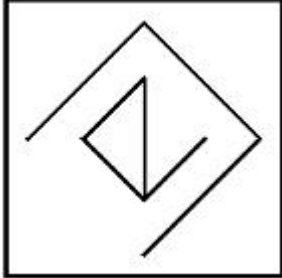


Options :

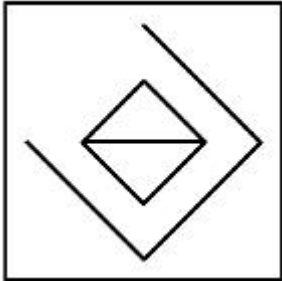
7155057877.



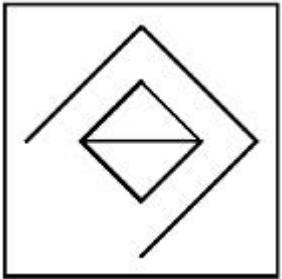
7155057878.



7155057879.



7155057880.



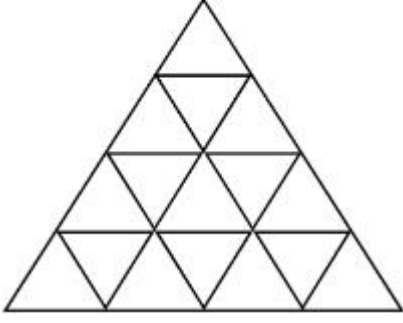
Question Number : 56 Question Id : 7155052519 Question Type : MCQ Option Shuffling : Yes Is

Question Mandatory : No Calculator : None Response Time : N.A Think Time : N.A Minimum

Instruction Time : 0

Correct Marks : 4 Wrong Marks : 1

How many triangles are there in given figure:-



Options :

7155057881. 26

7155057882. 25

7155057883. 27

7155057884. 24

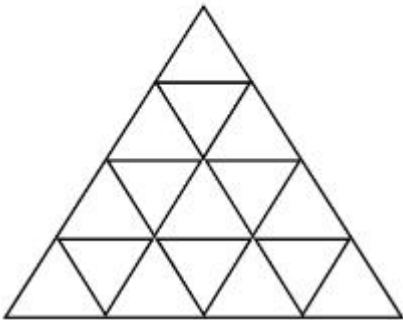
Question Number : 56 Question Id : 7155052519 Question Type : MCQ Option Shuffling : Yes Is

Question Mandatory : No Calculator : None Response Time : N.A Think Time : N.A Minimum

Instruction Time : 0

Correct Marks : 4 Wrong Marks : 1

దత్త చిత్రంలో ఎన్ని త్రిభుజాలున్నాయి?



Options :

7155057881. 26

7155057882. 25

7155057883. 27

7155057884. 24

Question Number : 57 Question Id : 7155052520 Question Type : MCQ Option Shuffling : Yes Is Question Mandatory : No Calculator : None Response Time : N.A Think Time : N.A Minimum Instruction Time : 0

Correct Marks : 4 Wrong Marks : 1

Find the odd one out:-

7, 9, 25, 32, 43, 59

Options :

7155057885. 59

7155057886. 32

7155057887. 25

7155057888. 9

Question Number : 57 Question Id : 7155052520 Question Type : MCQ Option Shuffling : Yes Is Question Mandatory : No Calculator : None Response Time : N.A Think Time : N.A Minimum Instruction Time : 0

Correct Marks : 4 Wrong Marks : 1

వేరుగా ఉన్న దానిని గుర్తించండి:

7, 9, 25, 32, 43, 59

Options :

7155057885. 59

7155057886. 32

7155057887. 25

7155057888. 9

Question Number : 58 Question Id : 7155052521 Question Type : MCQ Option Shuffling : Yes Is

Question Mandatory : No Calculator : None Response Time : N.A Think Time : N.A Minimum

Instruction Time : 0

Correct Marks : 4 Wrong Marks : 1

A residential building has 15 floors. The height of ground floor is 4.2 meter (including length and slab thickness). Rest all other floors are of 3.3 meter high (including slab thickness). What is the total height of the building (from ground to terrace) in meters?

Options :

7155057889. 45.6 meter

7155057890. 50 meter

7155057891. 50.4 meter

7155057892. 51.6 meter

Question Number : 58 Question Id : 7155052521 Question Type : MCQ Option Shuffling : Yes Is

Question Mandatory : No Calculator : None Response Time : N.A Think Time : N.A Minimum

Instruction Time : 0

Correct Marks : 4 Wrong Marks : 1

ఒక నివాస భవనంలో 15 అంతస్తులున్నాయి. నేల అంతస్తు ఎత్తు 4.2 మీటర్లు (పొడవు మరియు స్లాబ్ మందాన్ని కలుపుకుని). మిగిలా అన్ని అంతస్తులు 3.3 మీటర్లు ఎత్తు (స్లాబ్ మందాన్ని కలుపుకుని). ఆ భవన మొత్తం ఎత్తు ఎంత (నేల నుండి పై వరకు) మీటర్లలో?

Options :

7155057889. 45.6 మీటర్లు

7155057890. 50 మీటర్లు

7155057891. 50.4 మీటర్లు

7155057892. 51.6 మీటర్లు

Question Number : 59 Question Id : 7155052522 Question Type : MCQ Option Shuffling : Yes Is Question Mandatory : No Calculator : None Response Time : N.A Think Time : N.A Minimum Instruction Time : 0

Correct Marks : 4 Wrong Marks : 1

Identify the mirror image of the given word:-

SUCCESS

Options :

7155057893. 22ECCU2

7155057894. 22ECCU2

7155057895. SUCCESS

7155057896. SSECCUS

Question Number : 59 Question Id : 7155052522 Question Type : MCQ Option Shuffling : Yes Is Question Mandatory : No Calculator : None Response Time : N.A Think Time : N.A Minimum Instruction Time : 0

Correct Marks : 4 Wrong Marks : 1

దత్త పదం యొక్క దర్పణ ప్రతిబింబం గుర్తించండి

SUCCESS

Options :

7155057893. SUCCEER

7155057894. SSECUN

7155057895. SUCCESS

7155057896. SSECCUS

Question Number : 60 Question Id : 7155052523 Question Type : MCQ Option Shuffling : Yes Is

Question Mandatory : No Calculator : None Response Time : N.A Think Time : N.A Minimum

Instruction Time : 0

Correct Marks : 4 Wrong Marks : 1

The scale of a map is 1:1000. If a car travels 7 cm from point 'A' to point 'B' on the Map. Then how much the car has travelled in original:-

Options :

7155057897. 0.7 km

7155057898. 7000 mm

7155057899. 7 km

7155057900. 70 meter

Question Number : 60 Question Id : 7155052523 Question Type : MCQ Option Shuffling : Yes Is

Question Mandatory : No Calculator : None Response Time : N.A Think Time : N.A Minimum

Instruction Time : 0

Correct Marks : 4 Wrong Marks : 1

పథం యొక్క స్కేల్ 1:1000. ఒక కారు పథంపై 'A' బిందువు నుండి 'B' బిందువుకి 7 సెం.మీ. ప్రయాణిస్తే, వాస్తవంగా ఆ కారు ఎంత దూరం ప్రయాణించింది?

Options :

7155057897. 0.7 km

7155057898. 7000 mm

7155057899. 7 km

7155057900. 70 meter

Question Number : 61 Question Id : 7155052524 Question Type : MCQ Option Shuffling : Yes Is

Question Mandatory : No Calculator : None Response Time : N.A Think Time : N.A Minimum

Instruction Time : 0

Correct Marks : 4 Wrong Marks : 1

A land size of 80 meter \times 40 meter for a house design is drawn on paper at a scale of 1:100, then what size is drawn on paper to represent the land?

Options :

7155057901. 8 meter \times 4 meter

7155057902. 80 meter \times 40 meter

7155057903. 8 centimeter \times 4 centimeter

7155057904. 4 meter \times 2 meter

Question Number : 61 Question Id : 7155052524 Question Type : MCQ Option Shuffling : Yes Is

Question Mandatory : No Calculator : None Response Time : N.A Think Time : N.A Minimum

Instruction Time : 0

Correct Marks : 4 Wrong Marks : 1

80 మీటర్లు \times 40 మీటర్లు పరిమాణ స్థలంలో ఇంటి నమూనాని 1:100 స్కేల్లో ఒక పేపర్ పై గీయాలి, అయితే ఆ స్థల పరిమాణం పేపర్ పై ఎంత?

Options :

7155057901. 8 మీటర్లు \times 4 మీటర్లు

7155057902. 80 మీటర్లు \times 40 మీటర్లు

7155057903. 8 సెంటిమీటర్లు \times 4 సెంటిమీటర్లు

7155057904. 4 మీటర్లు \times 2 మీటర్లు

Question Number : 62 Question Id : 7155052525 Question Type : MCQ Option Shuffling : Yes Is

Question Mandatory : No Calculator : None Response Time : N.A Think Time : N.A Minimum

Instruction Time : 0

Correct Marks : 4 Wrong Marks : 1

Find the missing number in given series.

16, 33, 65, 131, 261, (.....)

Options :

7155057905. 523

7155057906. 521

7155057907. 524

7155057908. 520

Question Number : 62 Question Id : 7155052525 Question Type : MCQ Option Shuffling : Yes Is

Question Mandatory : No Calculator : None Response Time : N.A Think Time : N.A Minimum

Instruction Time : 0

Correct Marks : 4 Wrong Marks : 1

దత్త శ్రేణిలో తప్పినా సంఖ్యను కనుక్కోండి.

16, 33, 65, 131, 261, (.....)

Options :

7155057905. 523

7155057906. 521

7155057907. 524

7155057908. 520

Question Number : 63 Question Id : 7155052526 Question Type : MCQ Option Shuffling : Yes Is

Question Mandatory : No Calculator : None Response Time : N.A Think Time : N.A Minimum

Instruction Time : 0

Correct Marks : 4 Wrong Marks : 1

In a code language if ROMAN is written as TQOCP: then ITALY is.....

Options :

7155057909. KVCMA

7155057910. KWCNB

7155057911. KUCLA

7155057912. KVCNA

Question Number : 63 Question Id : 7155052526 Question Type : MCQ Option Shuffling : Yes Is

Question Mandatory : No Calculator : None Response Time : N.A Think Time : N.A Minimum

Instruction Time : 0

Correct Marks : 4 Wrong Marks : 1

ఒక కోడ్ భాషలో ROMAN ని TQOCP: గా రాస్తే, ITALY అనేది

Options :

7155057909. KVCMA

7155057910. KWCNB

7155057911. KUCLA

7155057912. KVCNA

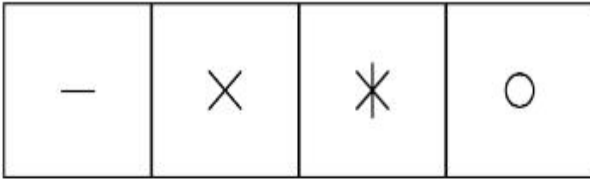
Question Number : 64 Question Id : 7155052527 Question Type : MCQ Option Shuffling : Yes Is

Question Mandatory : No Calculator : None Response Time : N.A Think Time : N.A Minimum


Instruction Time : 0

Correct Marks : 4 Wrong Marks : 1

Select a suitable figure from the four alternatives which will come in the empty box.



(A) (B) (C) (D)



Options :

7155057913. D

7155057914. C

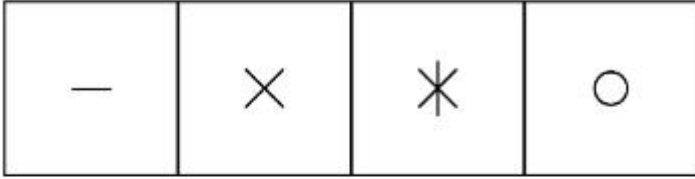
7155057915. B

7155057916. A


Question Number : 64 Question Id : 7155052527 Question Type : MCQ Option Shuffling : Yes Is Question Mandatory : No Calculator : None Response Time : N.A Think Time : N.A Minimum Instruction Time : 0

Correct Marks : 4 Wrong Marks : 1

నాలుగు ప్రత్యామ్నాయాలలో ఖాళీ స్థానంలో వచ్చు చిత్రం ఏది?



(A) (B) (C) (D)



Options :

7155057913. D

7155057914. C

7155057915. B

7155057916. A

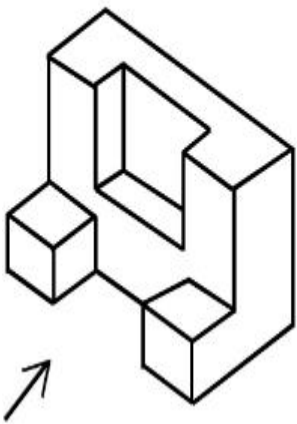
Question Number : 65 Question Id : 7155052528 Question Type : MCQ Option Shuffling : Yes Is

Question Mandatory : No Calculator : None Response Time : N.A Think Time : N.A Minimum

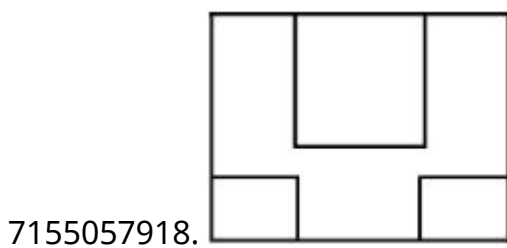
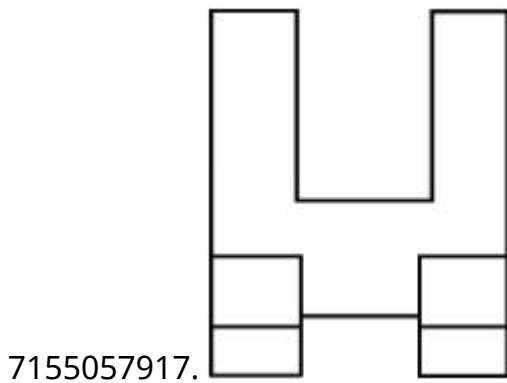
Instruction Time : 0

Correct Marks : 4 Wrong Marks : 1

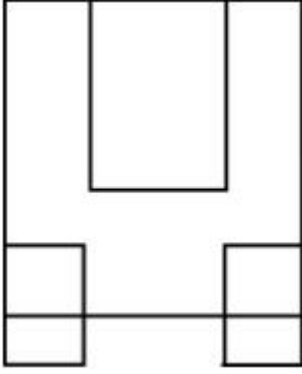
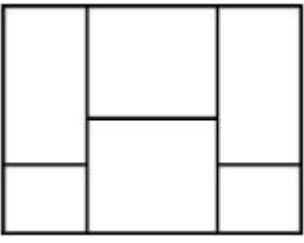
The 3D figure shows the view of an object. Looking in the direction of arrow, identify the most appropriate elevation from the given answer figures.



Options :



7155057919.

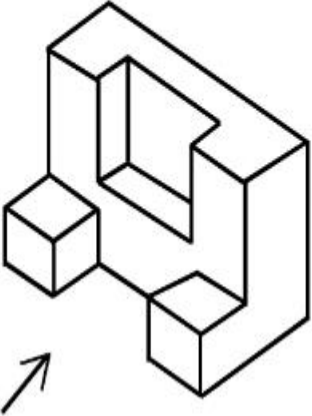


7155057920.

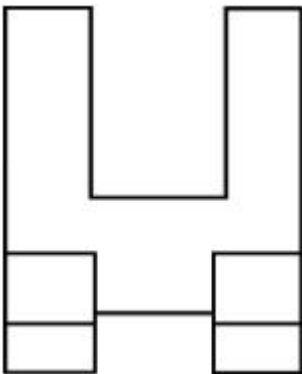
Question Number : 65 Question Id : 7155052528 Question Type : MCQ Option Shuffling : Yes Is Question Mandatory : No Calculator : None Response Time : N.A Think Time : N.A Minimum Instruction Time : 0

Correct Marks : 4 Wrong Marks : 1

దత్త 3-డి బొమ్మని బాణం గుర్తు దిశలో చూసినపుడు కనపడు సముచిత దృశ్యోన్నతిని గుర్తించండి.

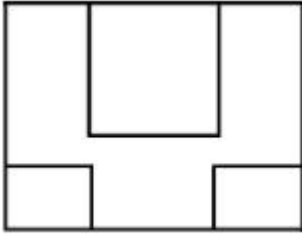


Options :

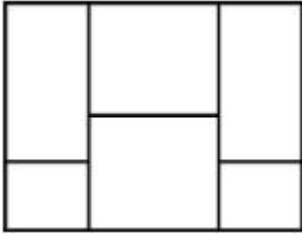


7155057917.

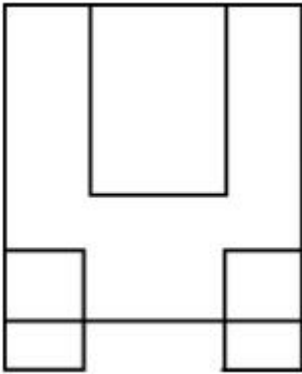
7155057918.



7155057919.



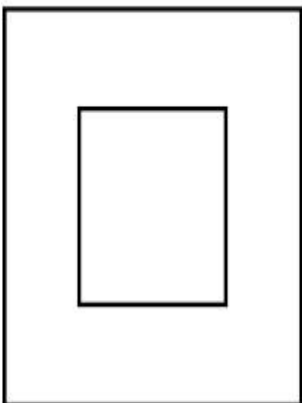
7155057920.



Question Number : 66 Question Id : 7155052529 Question Type : MCQ Option Shuffling : Yes Is Question Mandatory : No Calculator : None Response Time : N.A Think Time : N.A Minimum Instruction Time : 0

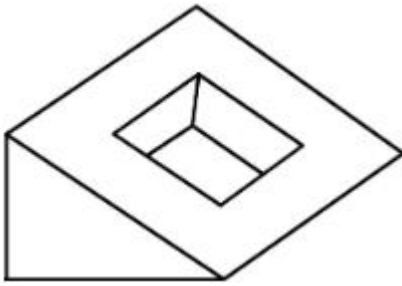
Correct Marks : 4 Wrong Marks : 1

Question figure shows top view/ plan of an object. Identify the INCORRECT 3D view from the given answers figure.

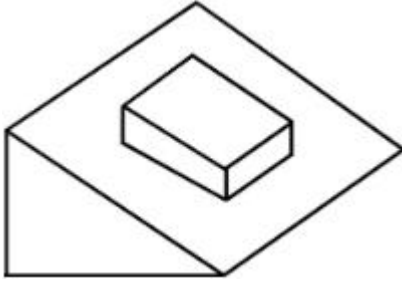


Options :


7155057921.



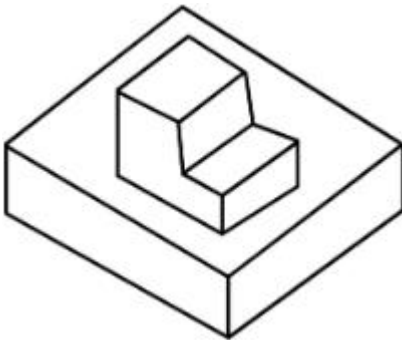
7155057922.



7155057923.




7155057924.

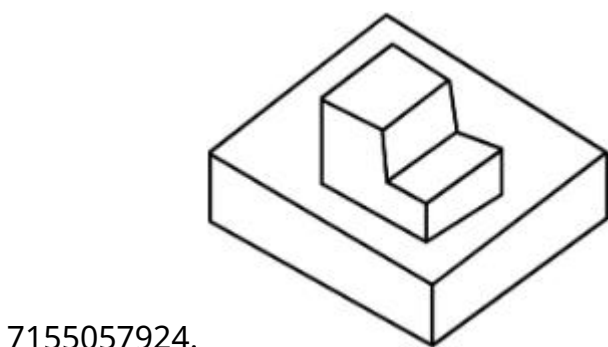
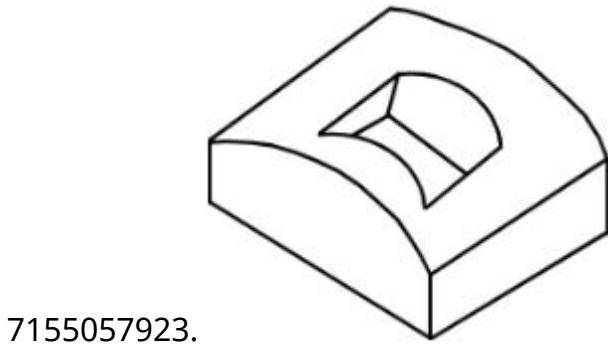
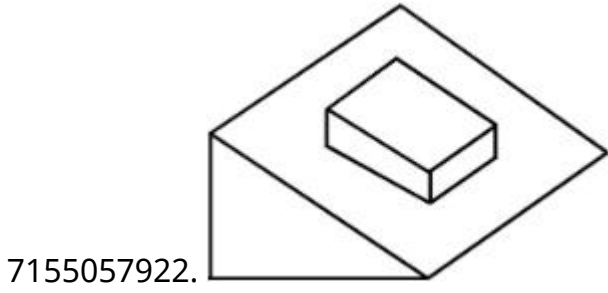
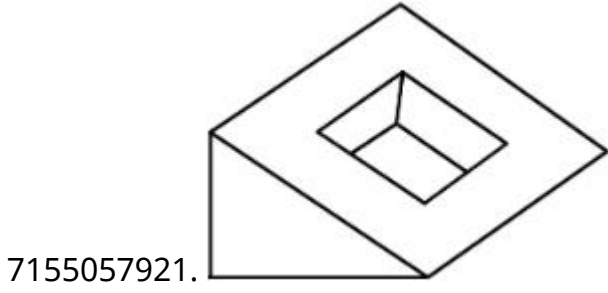


Question Number : 66 Question Id : 7155052529 Question Type : MCQ Option Shuffling : Yes Is Question Mandatory : No Calculator : None Response Time : N.A Think Time : N.A Minimum Instruction Time : 0 Correct Marks : 4 Wrong Marks : 1

దత్త చిత్రం ఒక వస్తువు అగ్ర వీక్షణం/నమూనా. జవాబు చిత్రాలలో సరైనది కాని దాని 3-డి వీక్షణాన్ని గుర్తించండి.



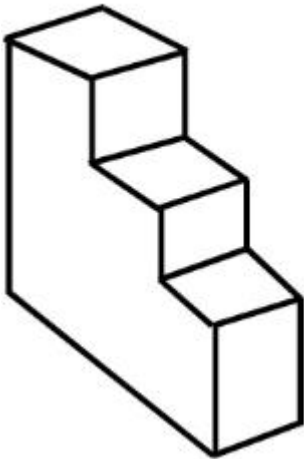
Options :



Question Number : 67 Question Id : 7155052530 Question Type : MCQ Option Shuffling : Yes Is Question Mandatory : No Calculator : None Response Time : N.A Think Time : N.A Minimum Instruction Time : 0

Correct Marks : 4 Wrong Marks : 1

How many surfaces does the object have?



Options :

7155057925. 9

7155057926. 10

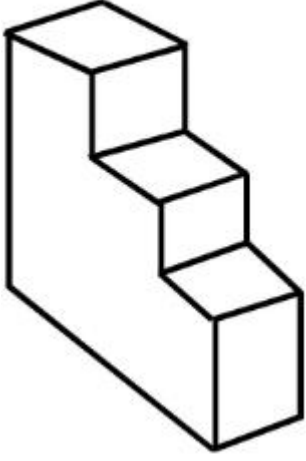
7155057927. 8

7155057928. 11

Question Number : 67 Question Id : 7155052530 Question Type : MCQ Option Shuffling : Yes Is Question Mandatory : No Calculator : None Response Time : N.A Think Time : N.A Minimum Instruction Time : 0

Correct Marks : 4 Wrong Marks : 1

వస్తుఉ ఎన్ని ఉపరితలాలు కలిగుంది?



Options :

7155057925. 9

7155057926. 10


7155057927. 8

7155057928. 11

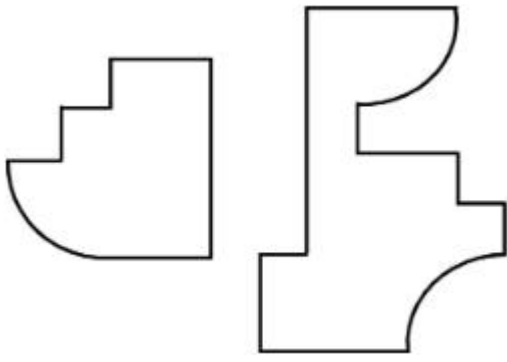
Question Number : 68 Question Id : 7155052531 Question Type : MCQ Option Shuffling : Yes Is Question Mandatory : No Calculator : None Response Time : N.A Think Time : N.A Minimum Instruction Time : 0

Correct Marks : 4 Wrong Marks : 1


If the question figure is cut into two parts, which of the answer figures complete the question figure without any overlappings?



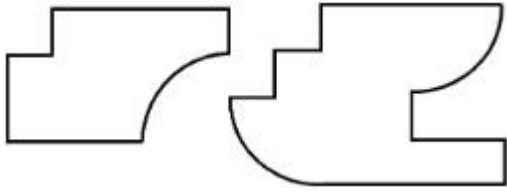
Options :



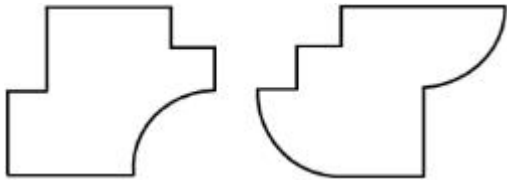
7155057929.



7155057930.



7155057931.




7155057932.

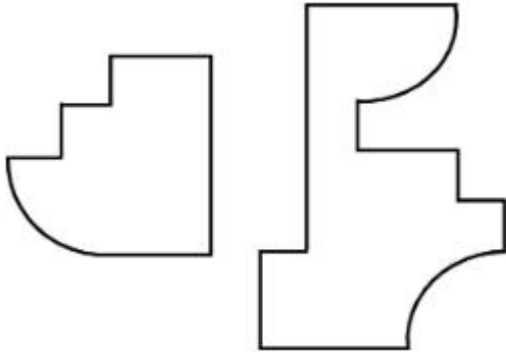
Question Number : 68 Question Id : 7155052531 Question Type : MCQ Option Shuffling : Yes Is Question Mandatory : No Calculator : None Response Time : N.A Think Time : N.A Minimum Instruction Time : 0

Correct Marks : 4 Wrong Marks : 1


దత్త చిత్రం రెండుగా కత్తరించిన, జవాబు చిత్రాలలో ఏ చిత్రాలు పూర్తిగా సరిగ్గా దత్త చిత్రంలా అమరుతాయి?



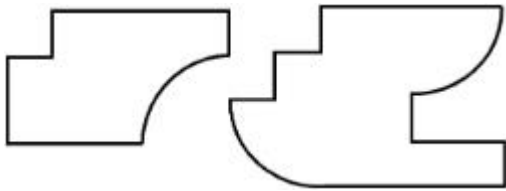
Options :



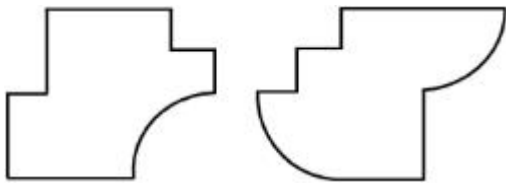
7155057929.



7155057930.



7155057931.

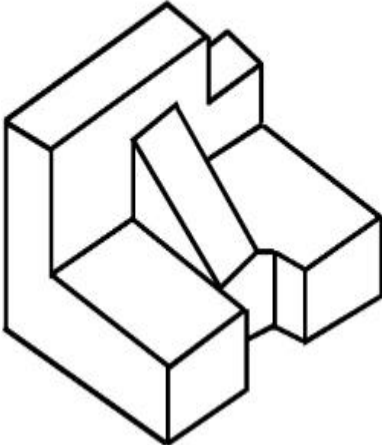


7155057932.

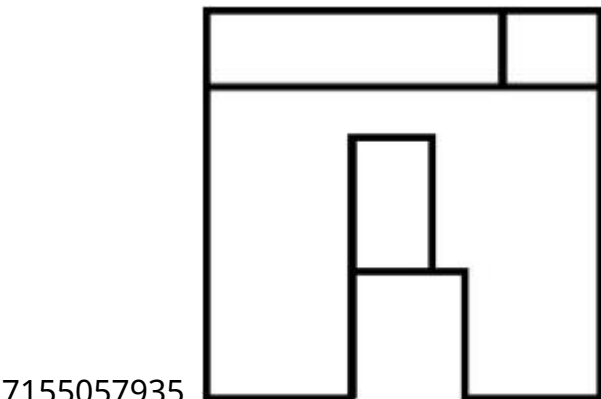
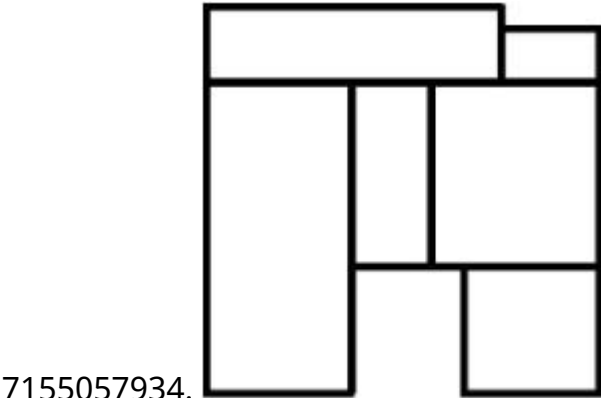
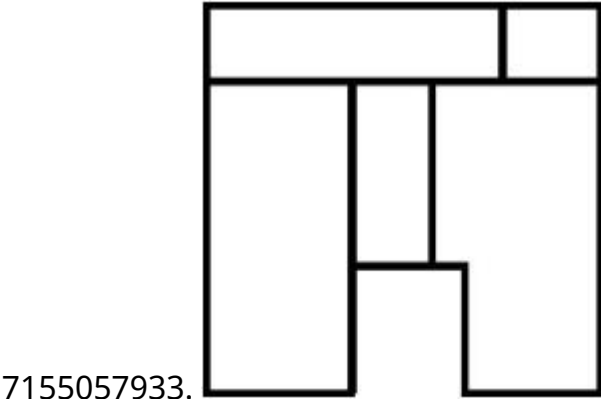
Question Number : 69 Question Id : 7155052532 Question Type : MCQ Option Shuffling : Yes Is Question Mandatory : No Calculator : None Response Time : N.A Think Time : N.A Minimum Instruction Time : 0

Correct Marks : 4 Wrong Marks : 1

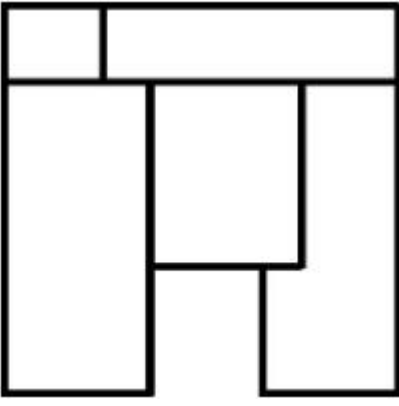
The 3D problem figure shows the view of an object. Identify its appropriate top view from the answer figures.



Options :



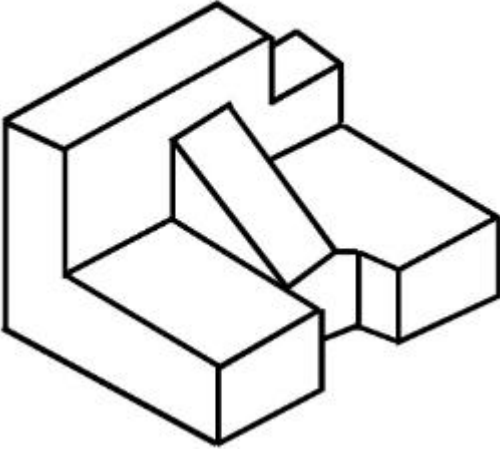
7155057936.



Question Number : 69 Question Id : 7155052532 Question Type : MCQ Option Shuffling : Yes Is Question Mandatory : No Calculator : None Response Time : N.A Think Time : N.A Minimum Instruction Time : 0

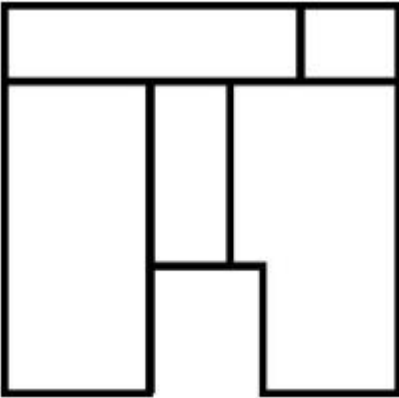
Correct Marks : 4 Wrong Marks : 1

దత్త 3-డి వక్షణానికి సరైన అగ్ర వక్షణాన్ని గుర్తించండి

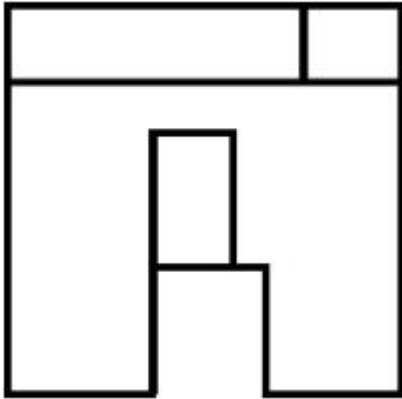
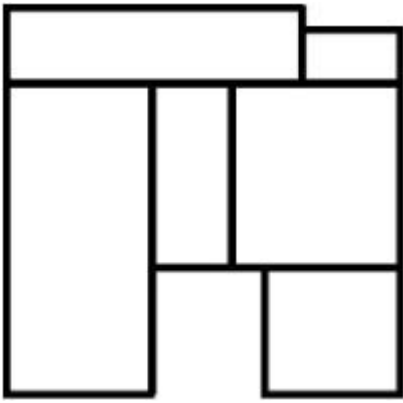


Options :

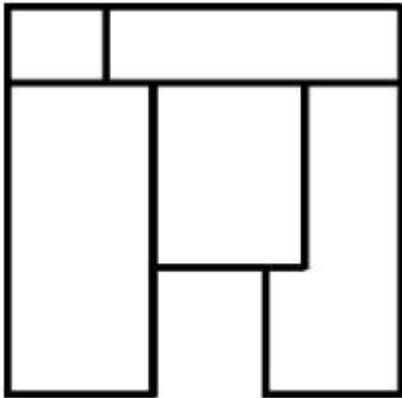
7155057933.



7155057934.



7155057935.

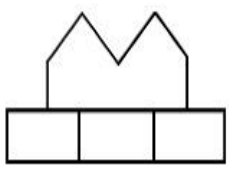
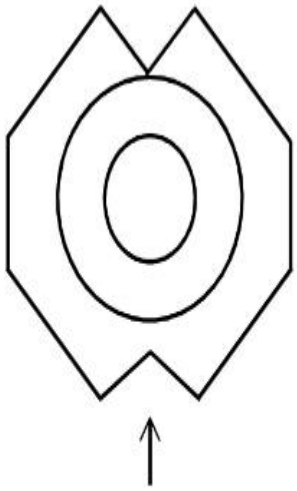


7155057936.

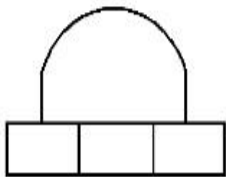
**Question Number : 70 Question Id : 7155052533 Question Type : MCQ Option Shuffling : Yes Is
Question Mandatory : No Calculator : None Response Time : N.A Think Time : N.A Minimum
Instruction Time : 0**

Correct Marks : 4 Wrong Marks : 1

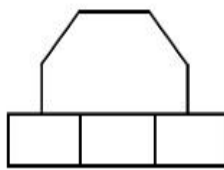
Identify the correct elevation when you look into the object from the marked arrow side of the plan of the object.



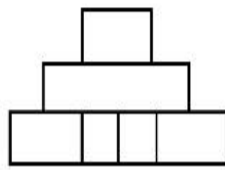
A



B



C



D

Options :

7155057937. D

7155057938. A

7155057939. B

7155057940. C

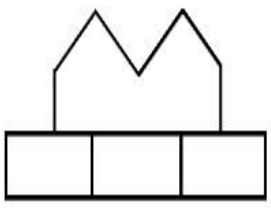

Question Number : 70 Question Id : 7155052533 Question Type : MCQ Option Shuffling : Yes Is

Question Mandatory : No Calculator : None Response Time : N.A Think Time : N.A Minimum

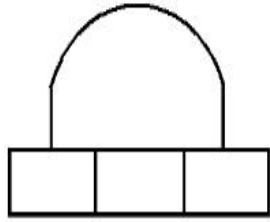
Instruction Time : 0

Correct Marks : 4 Wrong Marks : 1

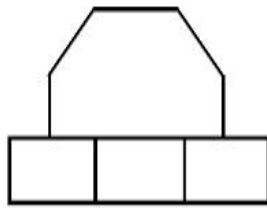
వస్తువు నమూనాని బాణం గుర్తు దిశలో చూసినప్పుడు కనపడు సరైన దృశ్యోన్నతిని గుర్తించండి.



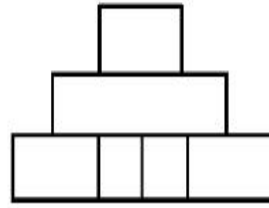
A



B



C



D

Options :

7155057937. D

7155057938. A

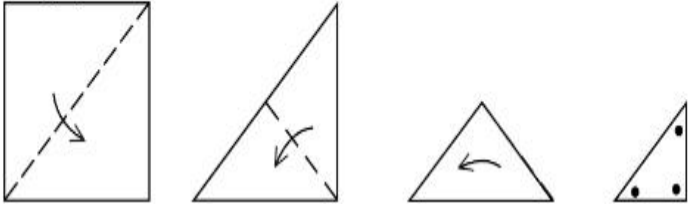
7155057939. B

7155057940. C

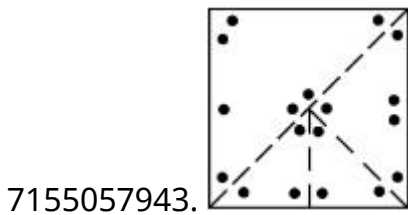
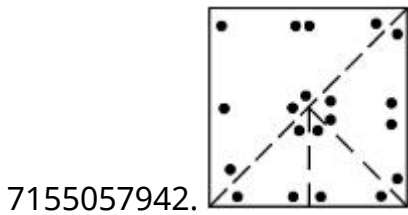
Question Number : 71 Question Id : 7155052534 Question Type : MCQ Option Shuffling : Yes Is Question Mandatory : No Calculator : None Response Time : N.A Think Time : N.A Minimum Instruction Time : 0

Correct Marks : 4 Wrong Marks : 1

A paper is folded in a given pattern and it is cut at the end. Identify which pattern is formed when the paper is unfold.



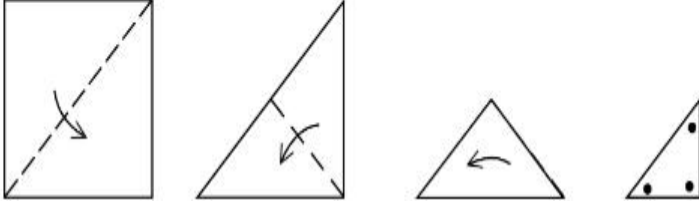
Options :



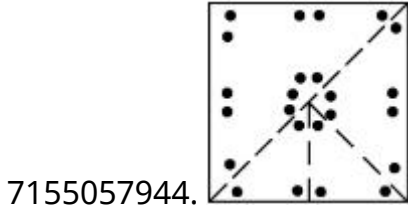
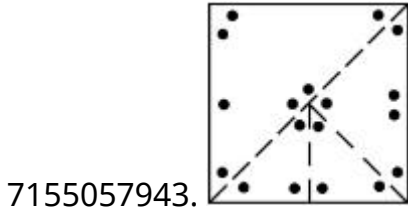
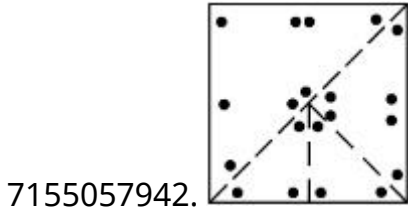
Question Number : 71 Question Id : 7155052534 Question Type : MCQ Option Shuffling : Yes Is Question Mandatory : No Calculator : None Response Time : N.A Think Time : N.A Minimum Instruction Time : 0

Correct Marks : 4 Wrong Marks : 1

ఒక కాగితాన్ని చూపించిన విధంగా మడత పెట్టి చివరిలో కత్తరించారు. ఆ కాగితాన్ని మడత తీసిన తర్వాత ఏర్పడు నమూనాని గుర్తించండి :



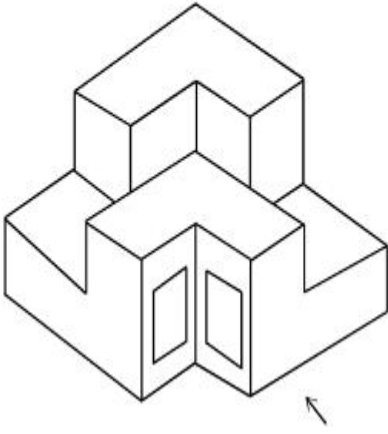
Options :



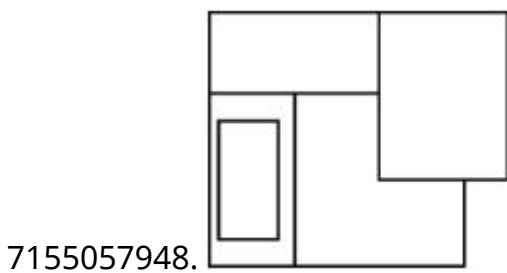
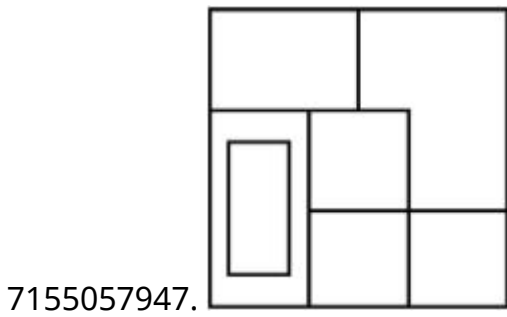
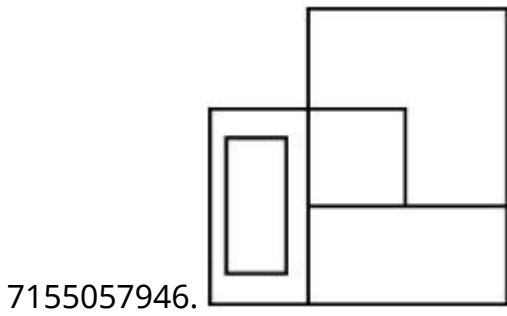
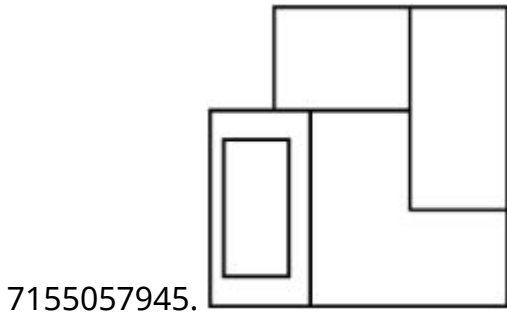
Question Number : 72 Question Id : 7155052535 Question Type : MCQ Option Shuffling : Yes Is Question Mandatory : No Calculator : None Response Time : N.A Think Time : N.A Minimum Instruction Time : 0

Correct Marks : 4 Wrong Marks : 1

The question figure shows the 3-D view of an object. Identify the correct view, looking in the direction of arrow.



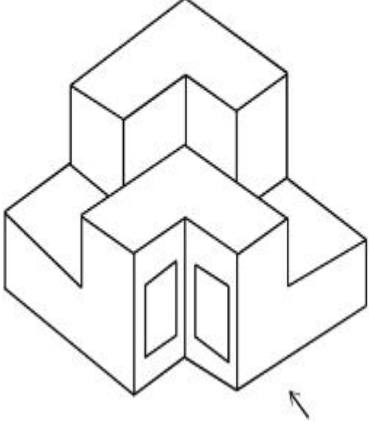
Options :



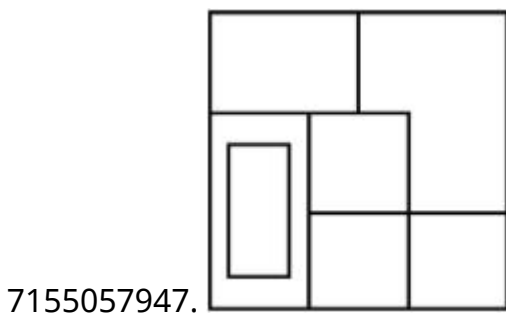
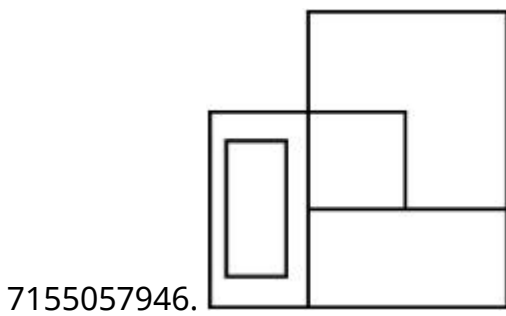
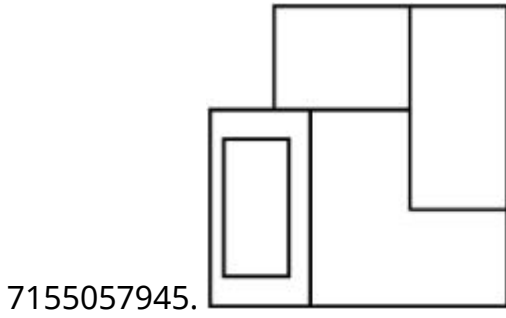
Question Number : 72 Question Id : 7155052535 Question Type : MCQ Option Shuffling : Yes Is Question Mandatory : No Calculator : None Response Time : N.A Think Time : N.A Minimum Instruction Time : 0

Correct Marks : 4 Wrong Marks : 1

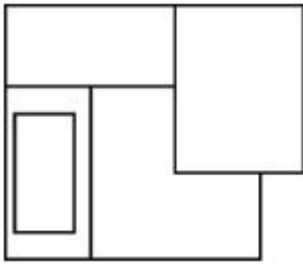
దత్త 3-డి వీక్షణాన్ని బాణం గుర్తు దిశలో చూసినప్పుడు కనపడు సరైన వీక్షణాన్ని గుర్తించండి.



Options :



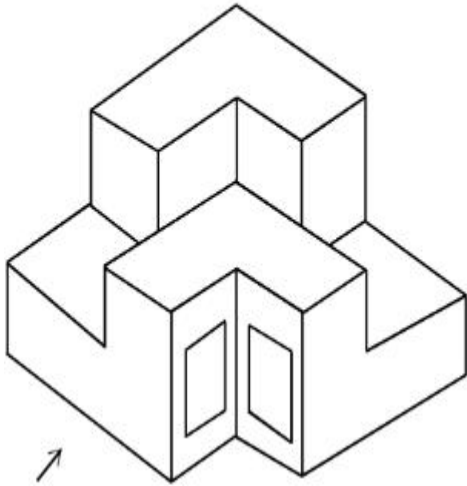
7155057948.



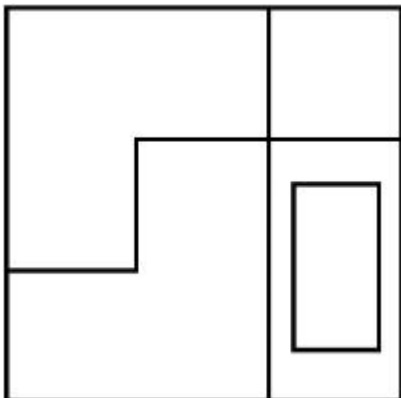
Question Number : 73 Question Id : 7155052536 Question Type : MCQ Option Shuffling : Yes Is Question Mandatory : No Calculator : None Response Time : N.A Think Time : N.A Minimum Instruction Time : 0

Correct Marks : 4 Wrong Marks : 1

The question figure shows the 3-D view of an object. Identify the correct view, looking in the direction of arrow.

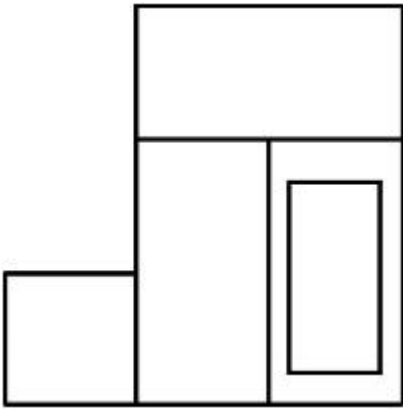


Options :

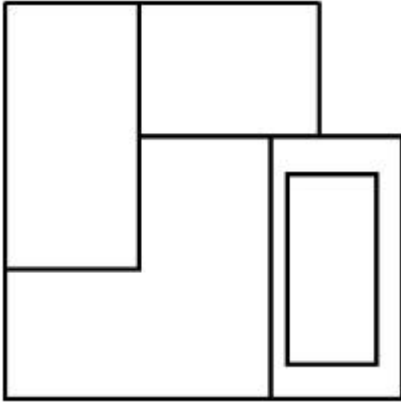


7155057949.

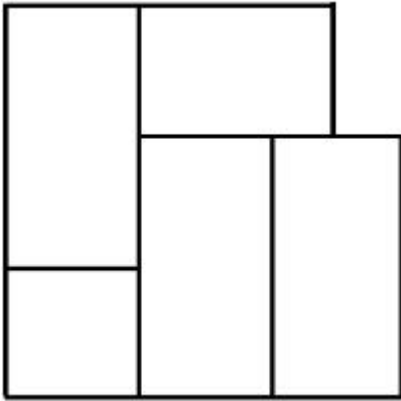
7155057950.



7155057951.



7155057952.



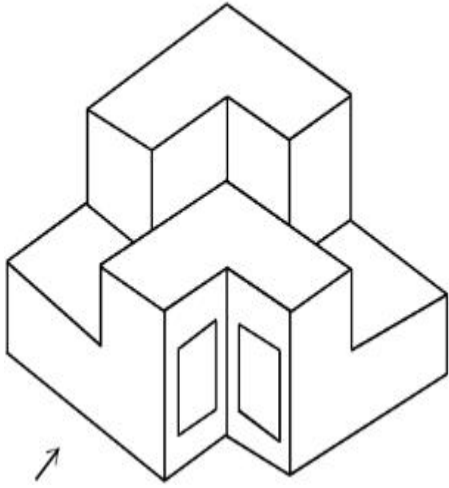
Question Number : 73 Question Id : 7155052536 Question Type : MCQ Option Shuffling : Yes Is

Question Mandatory : No Calculator : None Response Time : N.A Think Time : N.A Minimum

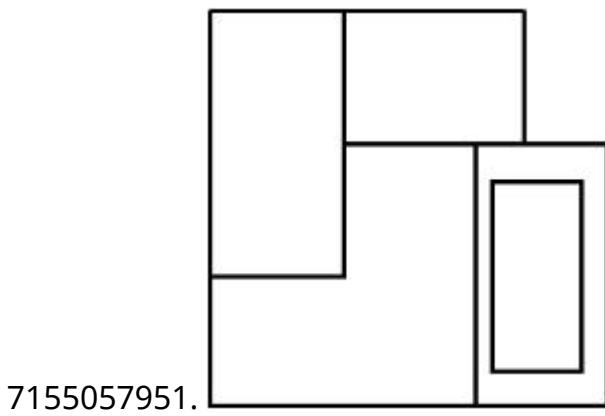
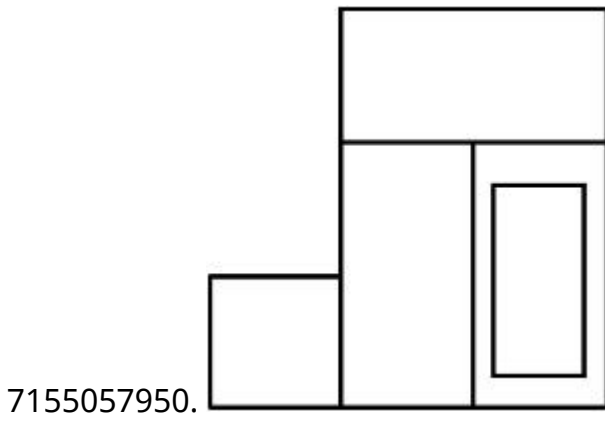
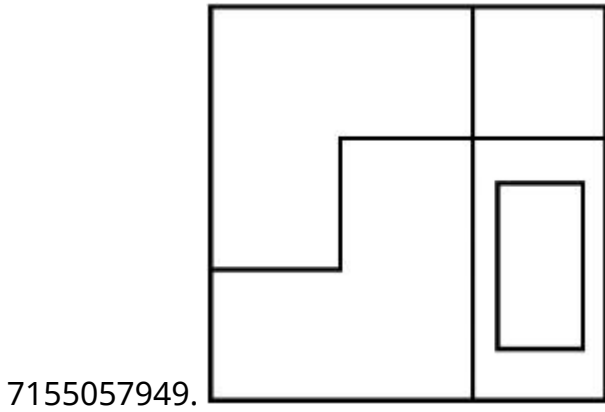
Instruction Time : 0

Correct Marks : 4 Wrong Marks : 1

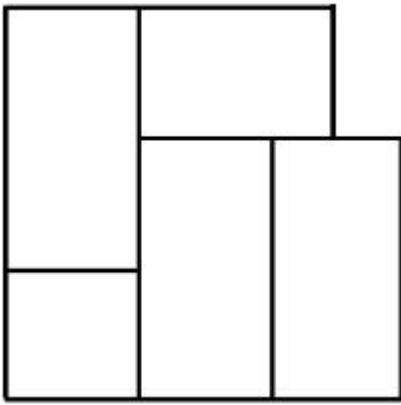
దత్త 3-డి వీక్షణాన్ని బాణం గుర్తు దిశలో చూసినపుడు కనపడు సరైన వీక్షణాన్ని గుర్తించండి.



Options :




7155057952.



Question Number : 74 Question Id : 7155052537 Question Type : MCQ Option Shuffling : Yes Is Question Mandatory : No Calculator : None Response Time : N.A Think Time : N.A Minimum Instruction Time : 0

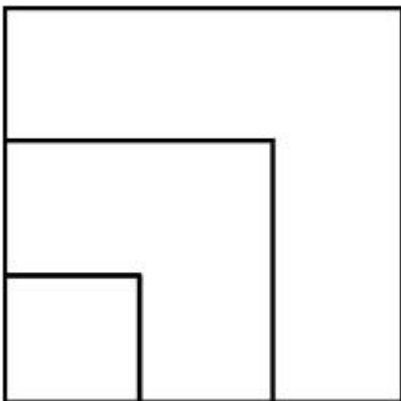
Correct Marks : 4 Wrong Marks : 1

From the given options below, choose the correct plan of the 3-D object, when viewed from the top.

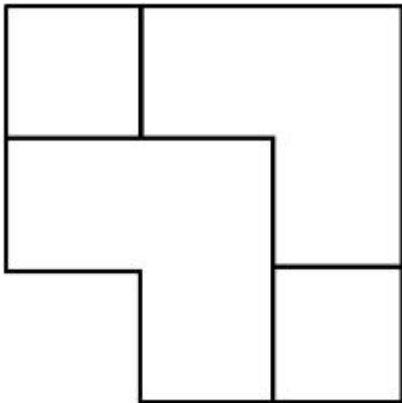
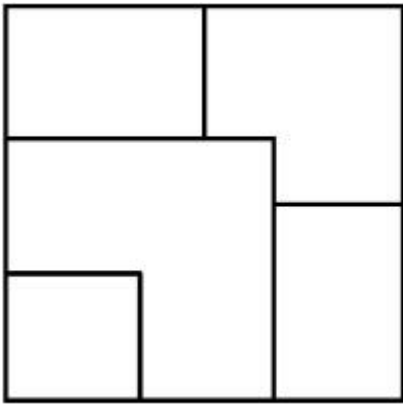


Options :

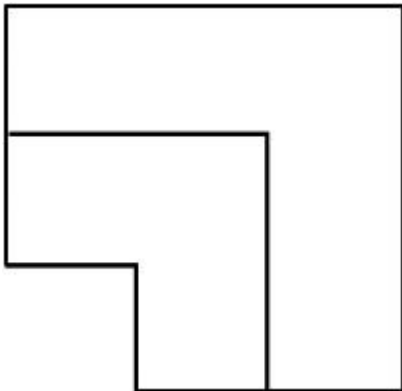
7155057953.



7155057954.



7155057955.

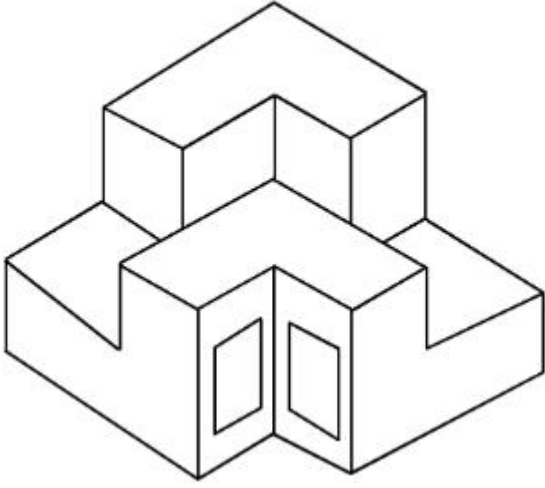


7155057956.

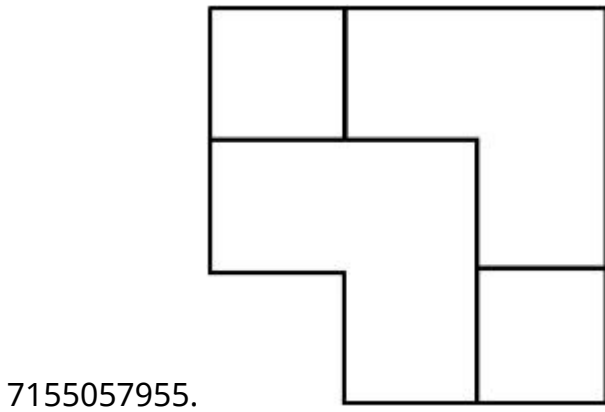
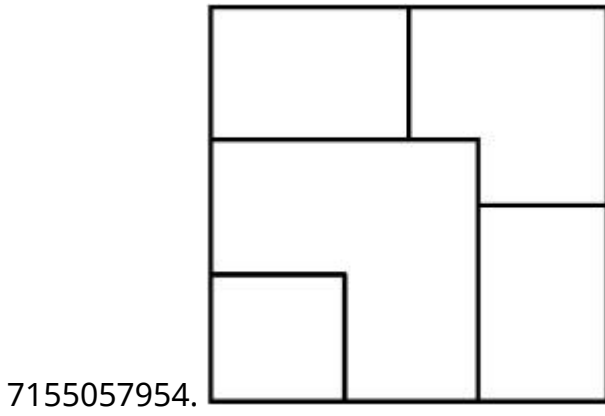
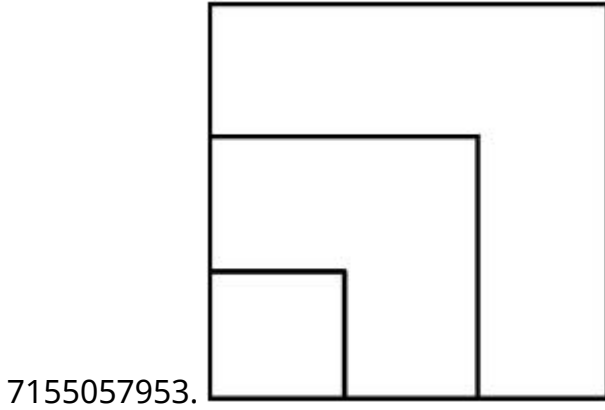
Question Number : 74 Question Id : 7155052537 Question Type : MCQ Option Shuffling : Yes Is Question Mandatory : No Calculator : None Response Time : N.A Think Time : N.A Minimum Instruction Time : 0

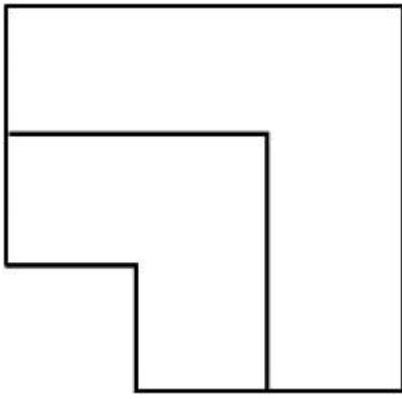
Correct Marks : 4 Wrong Marks : 1

దత్త 3-డి వస్తువుని పై నుండి చూసినపుడు కనపడు నమూనాని గుర్తించండి.



Options :



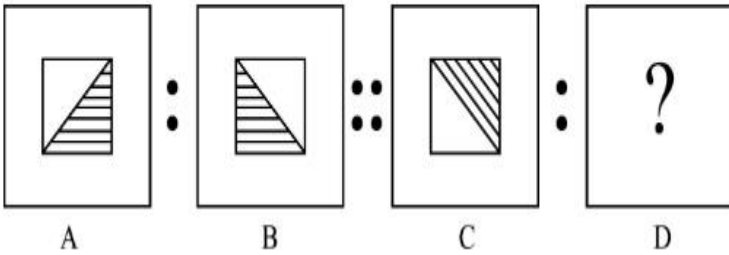


7155057956.

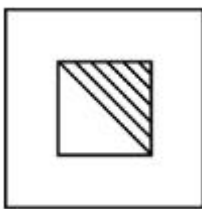
Question Number : 75 Question Id : 7155052538 Question Type : MCQ Option Shuffling : Yes Is Question Mandatory : No Calculator : None Response Time : N.A Think Time : N.A Minimum Instruction Time : 0

Correct Marks : 4 Wrong Marks : 1

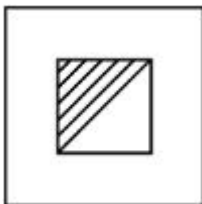
The second figure in the first part of the problem figures bears certain relationship to the first figure. Similarly, one of the figures of answer figures bears the same relationship to the first figure of the second part. Identify the correct option from the given answer figures.




Options :



7155057957.




7155057958.



7155057959.

7155057960.



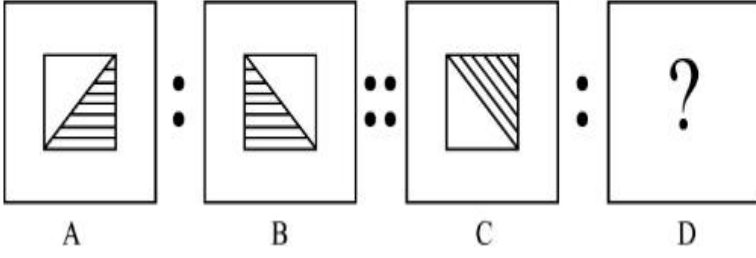
Question Number : 75 Question Id : 7155052538 Question Type : MCQ Option Shuffling : Yes Is

Question Mandatory : No Calculator : None Response Time : N.A Think Time : N.A Minimum

Instruction Time : 0

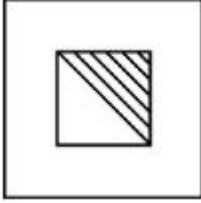
Correct Marks : 4 Wrong Marks : 1

మొదటి భాగంలోని చిత్రాలు ఒక సంబంధాన్ని కలిగి ఉన్నాయి. రెండవ భాగంలోని మొదటి చిత్రంలో సారూప్య సంబంధం ఏర్పరచు చిత్రాన్ని గుర్తించండి.




Options :

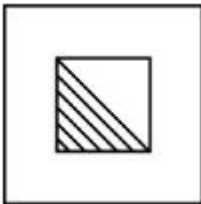
7155057957.



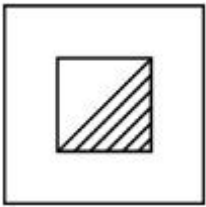
7155057958.



7155057959.



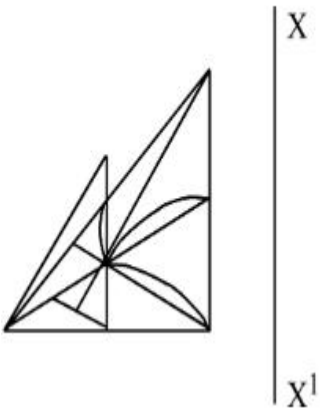
7155057960.



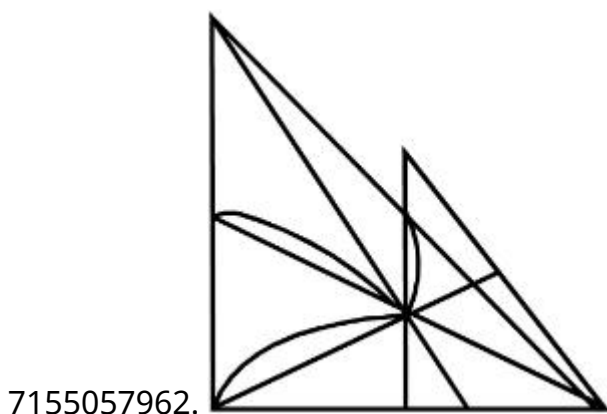
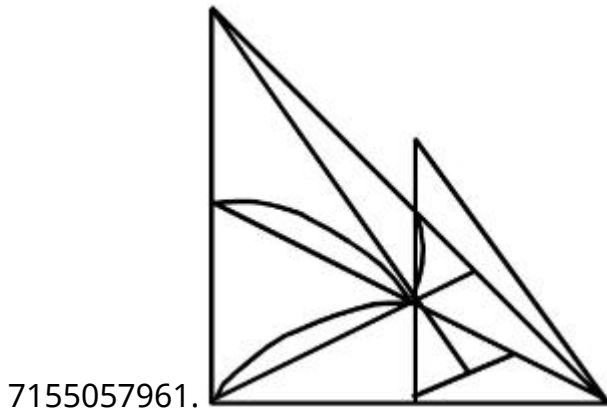
Question Number : 76 Question Id : 7155052539 Question Type : MCQ Option Shuffling : Yes Is Question Mandatory : No Calculator : None Response Time : N.A Think Time : N.A Minimum Instruction Time : 0

Correct Marks : 4 Wrong Marks : 1

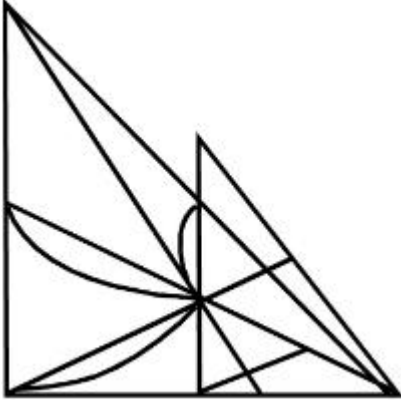
Identify the true mirror image of the figure amongst the answer figures with respect to X-X



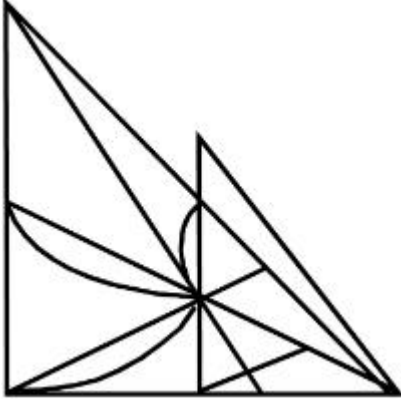
Options :



7155057963.



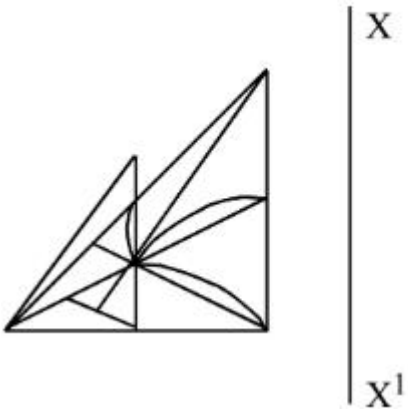
7155057964.



Question Number : 76 Question Id : 7155052539 Question Type : MCQ Option Shuffling : Yes Is Question Mandatory : No Calculator : None Response Time : N.A Think Time : N.A Minimum Instruction Time : 0

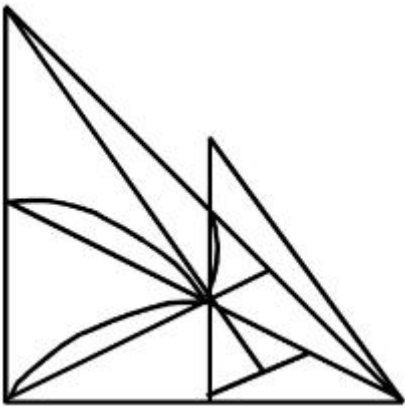
Correct Marks : 4 Wrong Marks : 1

X-X దృష్ట్యా చిత్రం యొక్క దర్పణ ప్రతిబింబాన్ని గుర్తించండి.

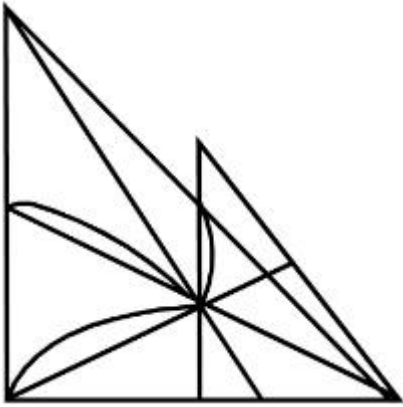


Options :

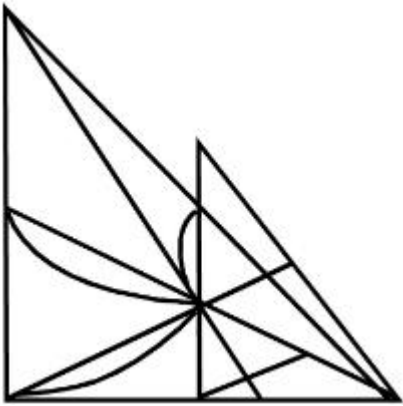
7155057961.



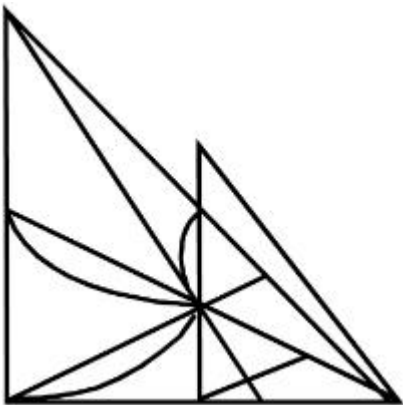
7155057962.



7155057963.



7155057964.

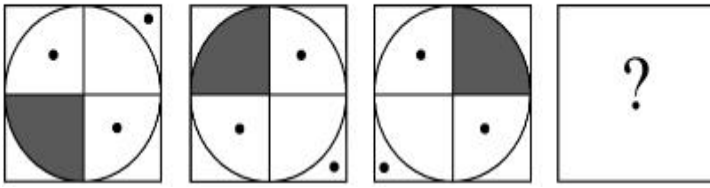


Question Mandatory : No Calculator : None Response Time : N.A Think Time : N.A Minimum

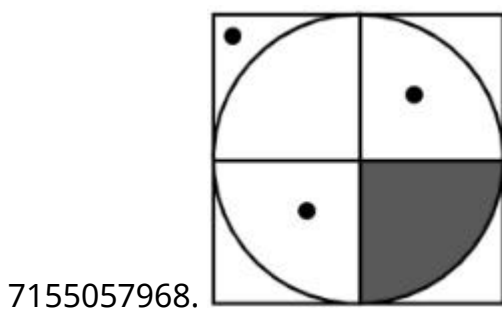
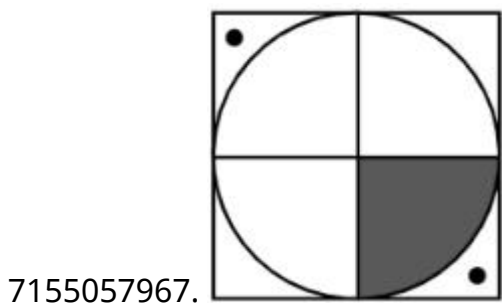
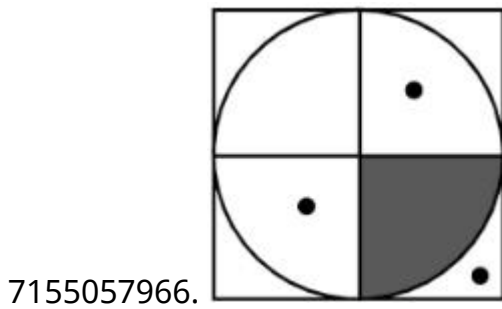
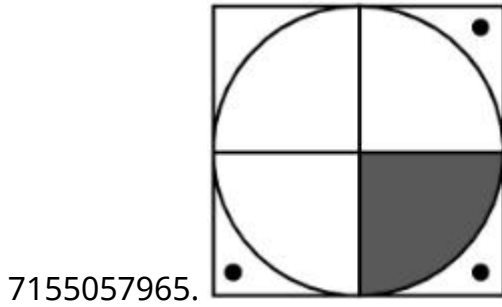
Instruction Time : 0

Correct Marks : 4 Wrong Marks : 1

Choose the correct option amongst the answer figures which complete the series.



Options :



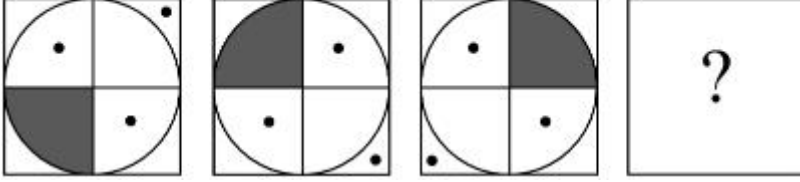
Question Number : 77 Question Id : 7155052540 Question Type : MCQ Option Shuffling : Yes Is

Question Mandatory : No Calculator : None Response Time : N.A Think Time : N.A Minimum

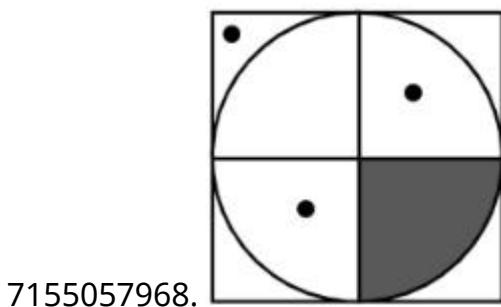
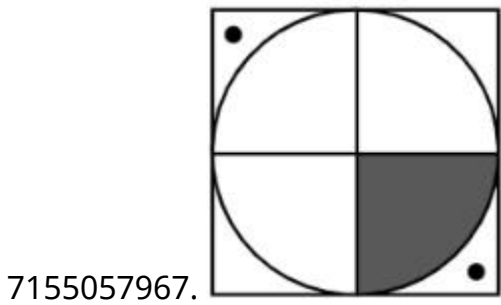
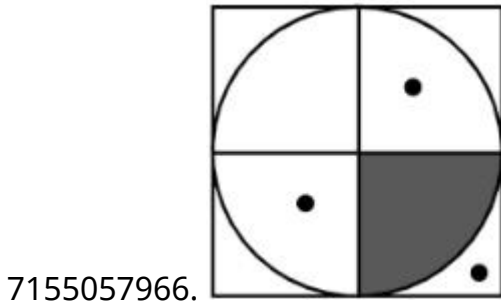
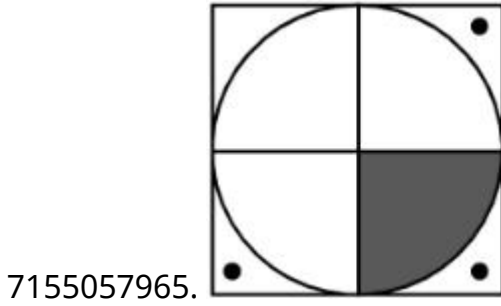
Instruction Time : 0

Correct Marks : 4 Wrong Marks : 1

శ్రేణిని పూరించు సరైన జవాబు ఎన్నుకోండి



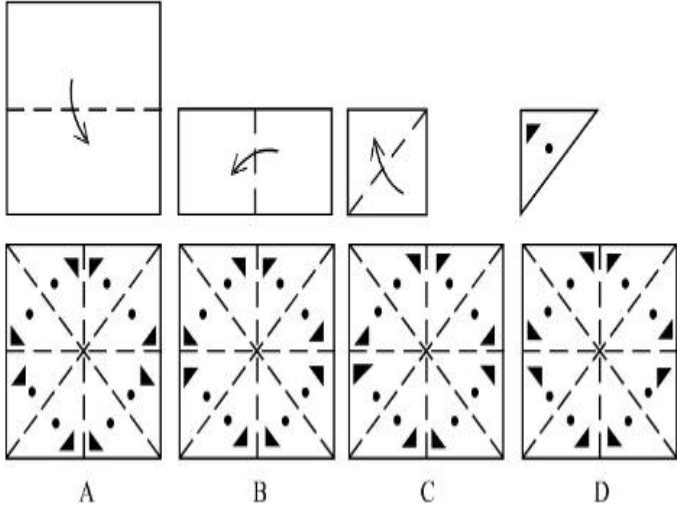
Options :



Question Number : 78 Question Id : 7155052541 Question Type : MCQ Option Shuffling : Yes Is Question Mandatory : No Calculator : None Response Time : N.A Think Time : N.A Minimum Instruction Time : 0

Correct Marks : 4 Wrong Marks : 1

Sheet is folded in marked format and cut led at last as shown. Identify from the options below, how the pattern will be made when it's fully unfold?



Options :

7155057969. B

7155057970. A

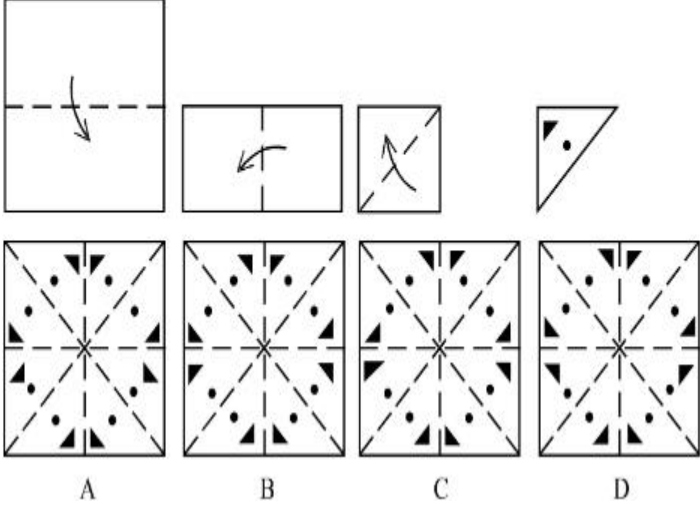
7155057971. D

7155057972. C

Question Number : 78 Question Id : 7155052541 Question Type : MCQ Option Shuffling : Yes Is Question Mandatory : No Calculator : None Response Time : N.A Think Time : N.A Minimum Instruction Time : 0

Correct Marks : 4 Wrong Marks : 1

ఒక కాగితాన్ని చూపించిన విధంగా మడత పెట్టి చివరిలో కత్తరించారు. ఆ కాగితాన్ని మడత తీసిన తర్వాత ఏర్పడు నమూనాని గుర్తించండి :



Options :

7155057969. B

7155057970. A

7155057971. D

7155057972. C

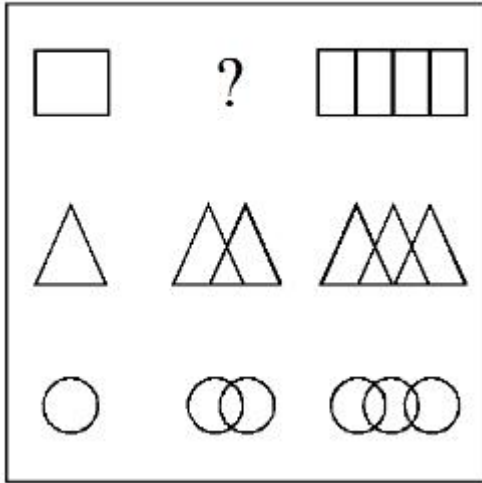
Question Number : 79 Question Id : 7155052542 Question Type : MCQ Option Shuffling : Yes Is

Question Mandatory : No Calculator : None Response Time : N.A Think Time : N.A Minimum

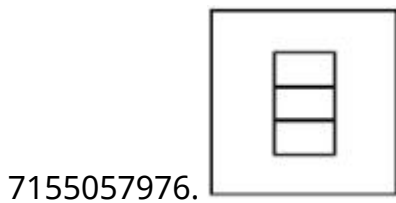
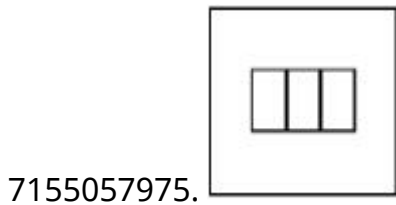
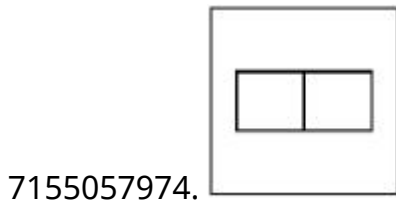
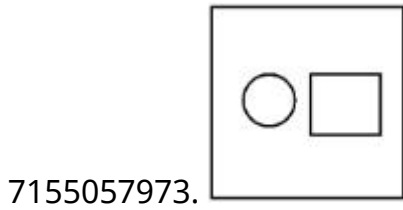
Instruction Time : 0

Correct Marks : 4 Wrong Marks : 1

In the figure mentioned below find the missing series:-

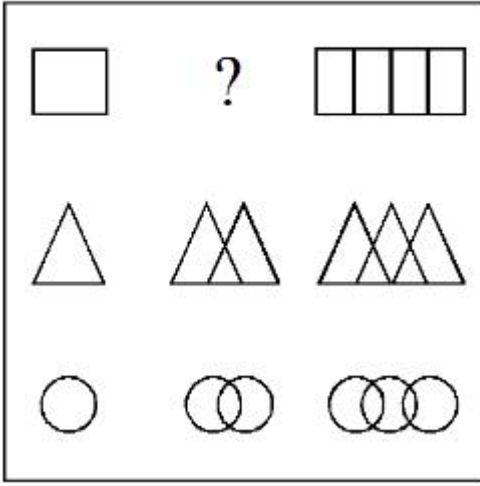


Options :

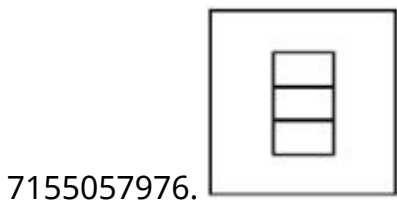
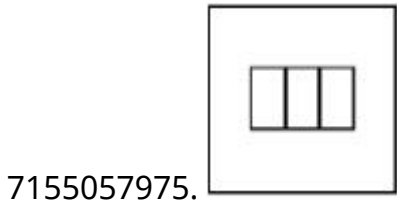
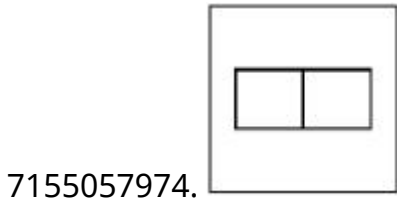
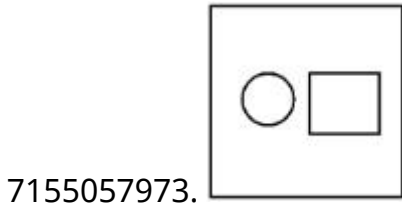


Question Number : 79 Question Id : 7155052542 Question Type : MCQ Option Shuffling : Yes Is Question Mandatory : No Calculator : None Response Time : N.A Think Time : N.A Minimum Instruction Time : 0 Correct Marks : 4 Wrong Marks : 1

కింది చిత్రంలో తప్పినా శ్రేణిని గుర్తించండి.

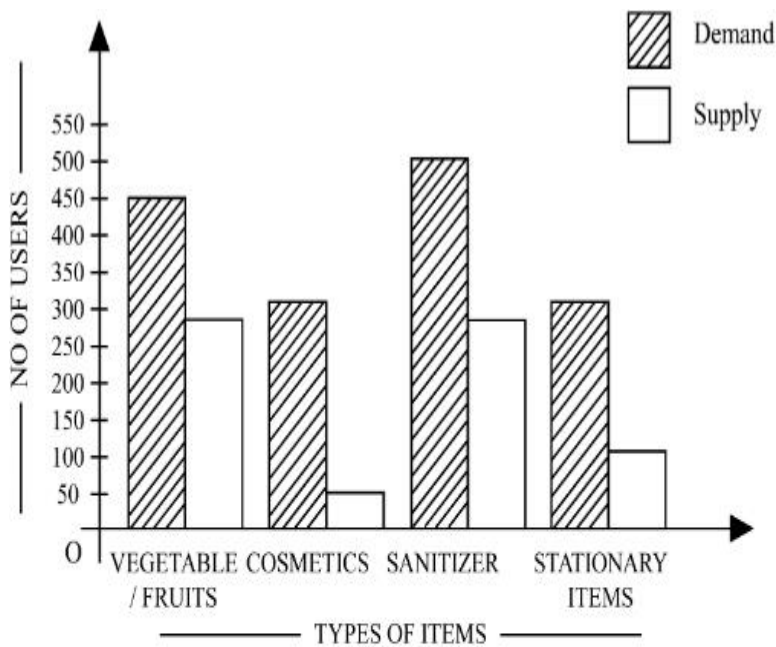


Options :



Question Number : 80 Question Id : 7155052543 Question Type : MCQ Option Shuffling : Yes Is
Question Mandatory : No Calculator : None Response Time : N.A Think Time : N.A Minimum
Instruction Time : 0

Correct Marks : 4 Wrong Marks : 1



The diagram shows the supply and demand of different users for different items. Which of the following is/are correct?

- A. Sanitizer only meet 50% of the demand
- B. Cosmetics has the least supply among all.
- C. Among all, two items have equal demand but difference in supply
- D. Among all, two items have equal supply and two items have equal demand.

Choose the correct answer from the options given below:-

Options :

7155057977. B and D only

7155057978. A and B only

7155057979. A and C only

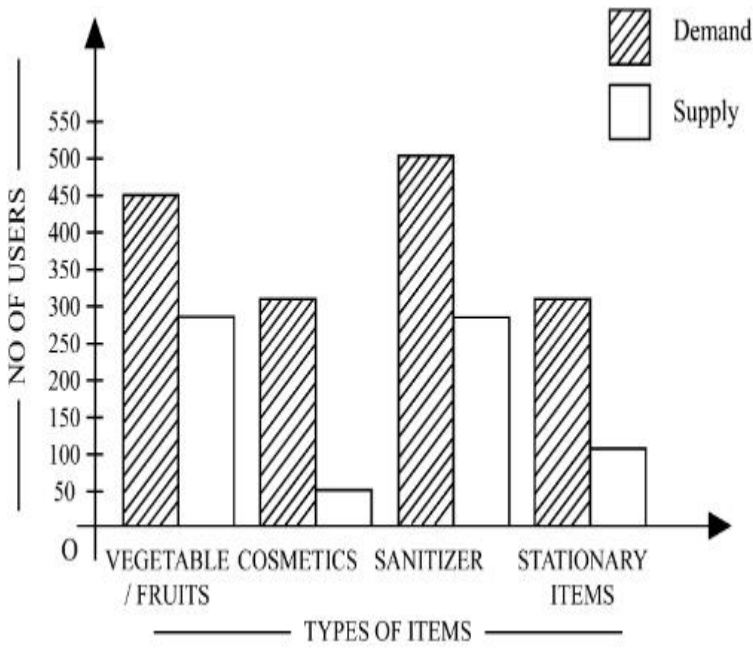
7155057980. B, C and D only

Question Number : 80 Question Id : 7155052543 Question Type : MCQ Option Shuffling : Yes Is

Question Mandatory : No Calculator : None Response Time : N.A Think Time : N.A Minimum

Instruction Time : 0

Correct Marks : 4 Wrong Marks : 1



చిత్రం వివిధ వినియోగదారుల వివిధ వస్తువుల అవసరం మరియు సరఫరాని సూచిస్తుంది. కింది వాటిలో ఏది/ఏవి నిజం?

- A. సానిటైజర్ 50% అవసరాన్ని మాత్రమే చేరుకుంది
- B. కాస్మెటిక్స్ అన్నింటిలో తక్కువ సరఫరా కలిగుంది.
- C. అన్నింటిలో, రెండు వస్తువులు సమాన అవసరాన్ని కలిగి ఉన్న విభిన్న సరఫరా కలిగున్నాయి.
- D. అన్నింటిలో, రెండు వస్తువులు సమాన సరఫరా కలిగి ఉన్నాయి మరియు సమాన అవసరాన్ని కలిగున్నాయి.

సరైన జవాబు ఎన్నుకోండి.

Options :

7155057977. B మరియు D మాత్రమే

7155057978. A మరియు B మాత్రమే

7155057979. A మరియు C మాత్రమే

7155057980. B, C మరియు D మాత్రమే

Section Id :	715505158
Section Number :	4
Section type :	Online
Mandatory or Optional :	Mandatory
Number of Questions :	25
Number of Questions to be attempted :	25
Section Marks :	100
Enable Mark as Answered Mark for Review and Clear Response :	Yes
Maximum Instruction Time :	0
Sub-Section Number :	1
Sub-Section Id :	715505158
Question Shuffling Allowed :	Yes
Is Section Default? :	null

Question Number : 81 Question Id : 7155052544 Question Type : MCQ Option Shuffling : Yes Is Question Mandatory : No Calculator : None Response Time : N.A Think Time : N.A Minimum Instruction Time : 0

Correct Marks : 4 Wrong Marks : 1

When a person cannot meet a minimum level of living standards compared to others in the same time and place, it is called :

Options :

7155057981. Poverty

7155057982. Abundance

7155057983. Adequacy

7155057984. Luxury

Question Number : 81 Question Id : 7155052544 Question Type : MCQ Option Shuffling : Yes Is Question Mandatory : No Calculator : None Response Time : N.A Think Time : N.A Minimum Instruction Time : 0

Correct Marks : 4 Wrong Marks : 1

ఒక సమయంలో మరియు స్థలంలో, ఒక మనిషి కనీస జీవన స్థాయి ప్రమాణాలను ఇతరులతో పోల్చినప్పుడు అందుకోలేకపోతే దానిని ఏమంటారు?

Options :

7155057981. పెదారికం

7155057982. అధిక లభ్యత

7155057983. తృప్తి

7155057984. విలాసం

Question Number : 82 Question Id : 7155052545 Question Type : MCQ Option Shuffling : Yes Is Question Mandatory : No Calculator : None Response Time : N.A Think Time : N.A Minimum Instruction Time : 0

Correct Marks : 4 Wrong Marks : 1

Acropolis in Greece is a/an:

Options :

7155057985. Court

7155057986. Citadel on a High Land

7155057987. Open Air Theatre

7155057988. Great Bath

Question Number : 82 Question Id : 7155052545 Question Type : MCQ Option Shuffling : Yes Is

Question Mandatory : No Calculator : None Response Time : N.A Think Time : N.A Minimum

Instruction Time : 0

Correct Marks : 4 Wrong Marks : 1

గ్రీన్ లో అక్రోపోలిస్ అనేది:

Options :

7155057985. న్యాయస్థానం

7155057986. ఎత్తైన ప్రదేశంలో కోట

7155057987. బహిరంగ సినిమాహాలు

7155057988. మంచి స్నానం

Question Number : 83 Question Id : 7155052546 Question Type : MCQ Option Shuffling : Yes Is

Question Mandatory : No Calculator : None Response Time : N.A Think Time : N.A Minimum

Instruction Time : 0

Correct Marks : 4 Wrong Marks : 1

In Land-use map, identify the colour code used for recreational uses.

Options :

7155057989. Yellow

7155057990. Green

7155057991. Purple

7155057992. Blue

Question Number : 83 Question Id : 7155052546 Question Type : MCQ Option Shuffling : Yes Is

Question Mandatory : No Calculator : None Response Time : N.A Think Time : N.A Minimum

Instruction Time : 0

Correct Marks : 4 Wrong Marks : 1

నేల ఉపయోగ పతంలో, వినోద ఉపయోగాల కొరకు ఏ రంగు కోడ్‌ని ఉపయోగిస్తారు?

Options :

7155057989. పసుపు

7155057990. ఆకుపచ్చ

7155057991. నీలలోహిత వర్ణం

7155057992. నీలం

Question Number : 84 Question Id : 7155052547 Question Type : MCQ Option Shuffling : Yes Is

Question Mandatory : No Calculator : None Response Time : N.A Think Time : N.A Minimum

Instruction Time : 0

Correct Marks : 4 Wrong Marks : 1

Statement I : The plan of Delhi city is in the radial form.

Statement II : The plan of Delhi city is in the Grid Iron form.

In the light of the above statements, choose the *correct* answer from the options given below:

Options :

7155057993. Both Statement **I** and Statement **II** are true

7155057994. Both Statement **I** and Statement **II** are false

7155057995. Statement **I** is true but Statement **II** is false

7155057996. Statement **I** is false but Statement **II** is true

Question Number : 84 Question Id : 7155052547 Question Type : MCQ Option Shuffling : Yes Is

Question Mandatory : No Calculator : None Response Time : N.A Think Time : N.A Minimum

Instruction Time : 0

Correct Marks : 4 Wrong Marks : 1

ప్రకటన I : ఢిల్లీ పట్టణ ప్రణాళిక రేడియల్ రూపంలో ఉంది.

ప్రకటన II : ఢిల్లీ పట్టణ ప్రణాళిక గ్రిడ్ ఐరన్ రూపంలో ఉంది.

పై ప్రకటనల ఆధారంగా సరైన జవాబు ఎన్నుకోండి

Options :

7155057993. ప్రకటన I మరియు ప్రకటన II రెండూ నిజం

7155057994. ప్రకటన I మరియు ప్రకటన II రెండూ అబద్ధం

7155057995. ప్రకటన I నిజం కాని ప్రకటన II అబద్ధం

7155057996. ప్రకటన I అబద్ధం కాని ప్రకటన II నిజం

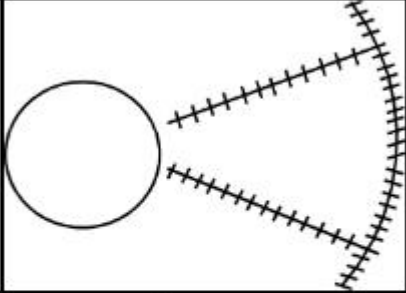
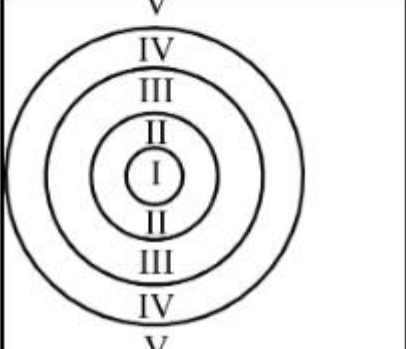
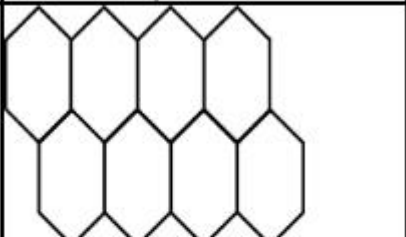
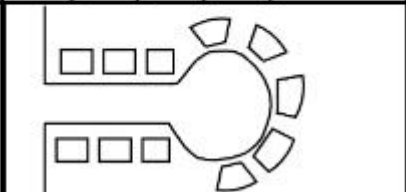
Question Number : 85 Question Id : 7155052548 Question Type : MCQ Option Shuffling : Yes Is

Question Mandatory : No Calculator : None Response Time : N.A Think Time : N.A Minimum

Instruction Time : 0

Correct Marks : 4 Wrong Marks : 1

Match List I with List II

LIST I		LIST II	
A.		I.	Christaller's concept
B.		II.	Garden City concept
C.		III.	Ernest Burgess
D.		IV.	Radburn concept

Choose the correct answer from the options given below:

Options :

7155057997. A-II, B-III, C-I, D-IV

7155057998. A-III, B-I, C-II, D-IV

7155057999. A-IV, B-III, C-I, D-II

7155058000. A-II, B-III, C-IV, D-I

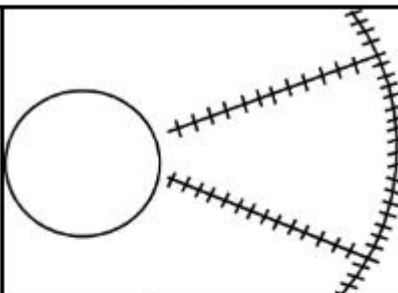
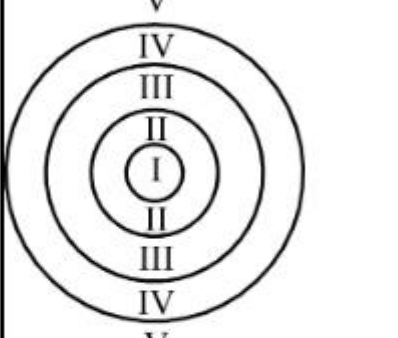
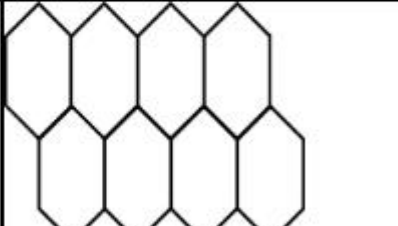
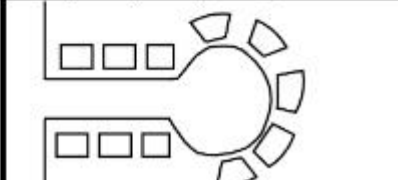
Question Number : 85 Question Id : 7155052548 Question Type : MCQ Option Shuffling : Yes Is

Question Mandatory : No Calculator : None Response Time : N.A Think Time : N.A Minimum

Instruction Time : 0

Correct Marks : 4 Wrong Marks : 1

జతపరచండి.

జాబితా I		జాబితా II	
A.		I.	క్రిస్టల్ భావన
B.		II.	గార్డెన్ సిటీ భావన
C.		III.	ఎమెస్టె బర్గస్సె
D.		IV.	రాడ్బర్న్ భావన

సరైన జవాబు ఎన్నుకోండి.

Options :

7155057997. A-II, B-III, C-I, D-IV

7155057998. A-III, B-I, C-II, D-IV

7155057999. A-IV, B-III, C-I, D-II

7155058000. A-II, B-III, C-IV, D-I

Question Number : 86 Question Id : 7155052549 Question Type : MCQ Option Shuffling : Yes Is
Question Mandatory : No Calculator : None Response Time : N.A Think Time : N.A Minimum
Instruction Time : 0

Correct Marks : 4 Wrong Marks : 1

Match List I with List II

LIST I		LIST II	
A.	Tower in the Park	I.	Sir Ebenezer Howards
B.	Neighbourhood Unit	II.	Le-Corbusier
C.	Garden City	III.	Clerence Perry
D.	Sector Model	IV.	Homer Hoyt

Choose the correct answer from the options given below:

Options :

7155058001. A-I, B-III, C-IV, D-II

7155058002. A-II, B-III, C-I, D-IV

7155058003. A-II, B-III, C-IV, D-I

7155058004. A-III, B-II, C-I, D-IV

Question Number : 86 Question Id : 7155052549 Question Type : MCQ Option Shuffling : Yes Is
Question Mandatory : No Calculator : None Response Time : N.A Think Time : N.A Minimum
Instruction Time : 0

Correct Marks : 4 Wrong Marks : 1

జతపరచండి.

జాబితా I		జాబితా II	
A.	టవర్ ఇన్ ద పార్క్	I.	సర్ ఎబెనజర్ హోవార్డ్
B.	నెబర్హుడ్ యూనిట్	II.	లీ కార్బుసియర్
C.	గార్డెన్ సిటీ	III.	క్లెరెన్స్ పేరీ
D.	సెక్టర్ నమూనా	IV.	హోమ్స్ హోయట్స్

సరైన జవాబు ఎన్నుకోండి.

Options :

7155058001. A-I, B-III, C-IV, D-II

7155058002. A-II, B-III, C-I, D-IV

7155058003. A-II, B-III, C-IV, D-I

7155058004. A-III, B-II, C-I, D-IV

Question Number : 87 Question Id : 7155052550 Question Type : MCQ Option Shuffling : Yes Is Question Mandatory : No Calculator : None Response Time : N.A Think Time : N.A Minimum Instruction Time : 0

Correct Marks : 4 Wrong Marks : 1

Match List I with List II

LIST I		LIST II	
A.	1st Five Year Plan	I.	1969-1974
B.	4th Five Year Plan	II.	1951-1956
C.	8th Five Year Plan	III.	1992-1997
D.	11th Five Year Plan	IV.	2007-2012

Choose the correct answer from the options given below:

Options :

7155058005. A-I, B-II, C-III, D-IV

7155058006. A-II, B-I, C-III, D-IV

7155058007. A-II, B-III, C-IV, D-I

7155058008. A-II, B-I, C-IV, D-III

Question Number : 87 Question Id : 7155052550 Question Type : MCQ Option Shuffling : Yes Is Question Mandatory : No Calculator : None Response Time : N.A Think Time : N.A Minimum Instruction Time : 0

Correct Marks : 4 Wrong Marks : 1

జతపరచండి.

జాబితా I		జాబితా II	
A.	1వ పంచవర్ష ప్రణాళిక	I.	1969-1974
B.	4వ పంచవర్ష ప్రణాళిక	II.	1951-1956
C.	8వ పంచవర్ష ప్రణాళిక	III.	1992-1997
D.	11వ పంచవర్ష ప్రణాళిక	IV.	2007-2012

సరియన్ జవాబు ఎన్నుకోండి.

Options :

7155058005. A-I, B-II, C-III, D-IV

7155058006. A-II, B-I, C-III, D-IV

7155058007. A-II, B-III, C-IV, D-I

7155058008. A-II, B-I, C-IV, D-III

Question Number : 88 Question Id : 7155052551 Question Type : MCQ Option Shuffling : Yes Is

Question Mandatory : No Calculator : None Response Time : N.A Think Time : N.A Minimum

Instruction Time : 0

Correct Marks : 4 Wrong Marks : 1

Match List I with List II

LIST I		LIST II	
A.	Madurai	I.	Planned Hill city
B.	Aurovile	II.	Kadamba Vanam
C.	Lavasa	III.	Grid Iron
D.	Chandigarh	IV.	Matri Mandir

Choose the correct answer from the options given below:

Options :

7155058009. A-IV, B-I, C-II, D-III

7155058010. A-IV, B-II, C-I, D-III

7155058011. A-I, B-II, C-IV, D-III

7155058012. A-II, B-IV, C-I, D-III

Question Number : 88 Question Id : 7155052551 Question Type : MCQ Option Shuffling : Yes Is

Question Mandatory : No Calculator : None Response Time : N.A Think Time : N.A Minimum

Instruction Time : 0

Correct Marks : 4 Wrong Marks : 1

జతపరచండి

జాబితా I		జాబితా II	
A.	మధురై	I.	ప్రణాళిక కొండ పట్టణం
B.	అరావిలే	II.	కదంబ వనం
C.	లావస	III.	గ్రీడ్ ఐరన్
D.	చండిఘడ్	IV.	మత్రి మందిరం

సరైన జవాబు ఎన్నుకోండి

Options :

7155058009. A-IV, B-I, C-II, D-III

7155058010. A-IV, B-II, C-I, D-III

7155058011. A-I, B-II, C-IV, D-III

7155058012. A-II, B-IV, C-I, D-III

Question Number : 89 Question Id : 7155052552 Question Type : MCQ Option Shuffling : Yes Is

Question Mandatory : No Calculator : None Response Time : N.A Think Time : N.A Minimum

Instruction Time : 0

Correct Marks : 4 Wrong Marks : 1

Which of the following article is related to Panchayati Raj ?

Options :

7155058013. Article 243

7155058014. Article 324

7155058015. Article 124

7155058016. Article 73

Question Number : 89 Question Id : 7155052552 Question Type : MCQ Option Shuffling : Yes Is Question Mandatory : No Calculator : None Response Time : N.A Think Time : N.A Minimum Instruction Time : 0

Correct Marks : 4 Wrong Marks : 1

పంచాయత్ రాజ్ కి సంబంధించిన ఆర్టికల్ ఏది?

Options :

7155058013. ఆర్టికల్ 243

7155058014. ఆర్టికల్ 324

7155058015. ఆర్టికల్ 124

7155058016. ఆర్టికల్ 73

Question Number : 90 Question Id : 7155052553 Question Type : MCQ Option Shuffling : Yes Is Question Mandatory : No Calculator : None Response Time : N.A Think Time : N.A Minimum Instruction Time : 0

Correct Marks : 4 Wrong Marks : 1

How many acres is 1 hectare?

Options :

7155058017. 2.47

7155058018. 3.47

7155058019. 4.47

7155058020. 5.47

Question Number : 90 Question Id : 7155052553 Question Type : MCQ Option Shuffling : Yes Is Question Mandatory : No Calculator : None Response Time : N.A Think Time : N.A Minimum Instruction Time : 0

Correct Marks : 4 Wrong Marks : 1

1 వాళ్ళారు ఈని ఎకరాలకు సమానం ?

Options :

7155058017. 2.47

7155058018. 3.47

7155058019. 4.47

7155058020. 5.47

Question Number : 91 Question Id : 7155052554 Question Type : MCQ Option Shuffling : Yes Is Question Mandatory : No Calculator : None Response Time : N.A Think Time : N.A Minimum Instruction Time : 0

Correct Marks : 4 Wrong Marks : 1

What is the full form of the NITI ?

Options :

7155058021. National Institute for Transforming India

7155058022. National Industry for Technology India

7155058023. National Industry for Transforming India

7155058024. National Industrial Technical Institute

Question Number : 91 Question Id : 7155052554 Question Type : MCQ Option Shuffling : Yes Is

Question Mandatory : No Calculator : None Response Time : N.A Think Time : N.A Minimum

Instruction Time : 0

Correct Marks : 4 Wrong Marks : 1

NITI వివరంగా

Options :

7155058021. నేషనల్ ఇన్స్టిటూట్ ఫర్ ట్రాన్స్ఫార్మింగ్ ఇండియా

7155058022. నేషనల్ ఇండస్ట్రి ఫర్ టెక్నాలజీ ఇండియా

7155058023. నేషనల్ ఇండస్ట్రి ఫర్ ట్రాన్స్ఫార్మింగ్ ఇండియా

7155058024. నేషనల్ ఇండస్ట్రియల్ టెక్నికల్ ఇన్స్టిటూట్

Question Number : 92 Question Id : 7155052555 Question Type : MCQ Option Shuffling : Yes Is

Question Mandatory : No Calculator : None Response Time : N.A Think Time : N.A Minimum

Instruction Time : 0

Correct Marks : 4 Wrong Marks : 1

The term "Conurbation" was coined by ?

Options :

7155058025. Kevin Lynch

7155058026. Patrick Geddes

7155058027. Ebenezer Howard

7155058028. Lewis Mumford

Question Number : 92 Question Id : 7155052555 Question Type : MCQ Option Shuffling : Yes Is Question Mandatory : No Calculator : None Response Time : N.A Think Time : N.A Minimum Instruction Time : 0

Correct Marks : 4 Wrong Marks : 1

"కానుర్పేషన్ (Conurbation)" పదం ప్రస్తావించిందెవరు?

Options :

7155058025. కెవిన్ లింఛ్

7155058026. పట్రిక్ గెడ్స్

7155058027. ఎబనెజర్ హోవార్డ్

7155058028. లూయిస్ మమ్ఫోర్డ్

Question Number : 93 Question Id : 7155052556 Question Type : MCQ Option Shuffling : Yes Is Question Mandatory : No Calculator : None Response Time : N.A Think Time : N.A Minimum Instruction Time : 0

Correct Marks : 4 Wrong Marks : 1

Who is the planner of Durgapur city?

Options :

7155058029. Le Corbusier

7155058030. Ebenezer Howard

7155058031. Joseph Allen Stein

7155058032. Charles Correa

Question Number : 93 Question Id : 7155052556 Question Type : MCQ Option Shuffling : Yes Is
Question Mandatory : No Calculator : None Response Time : N.A Think Time : N.A Minimum
Instruction Time : 0

Correct Marks : 4 Wrong Marks : 1

దుర్గాపుర్ పట్టణ రూపకర్త ఎవరు?

Options :

7155058029. లీ కార్పొరేషన్

7155058030. ఎబనెజర్ హోవార్డ్

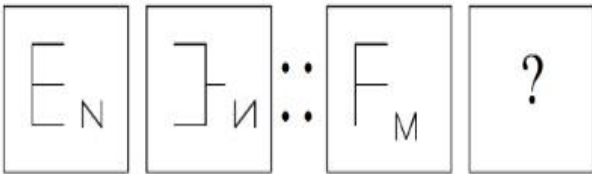
7155058031. జోసెఫ్ అలెన్ స్ట్రెయిన్

7155058032. చార్లెస్ కొరియా

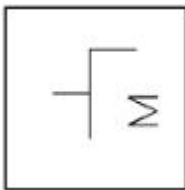
Question Number : 94 Question Id : 7155052557 Question Type : MCQ Option Shuffling : Yes Is
Question Mandatory : No Calculator : None Response Time : N.A Think Time : N.A Minimum
Instruction Time : 0

Correct Marks : 4 Wrong Marks : 1

In problem figures, A and B have certain relation. Identify which one of the answer figures will
have similar relation between C and D?

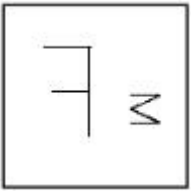


Options :

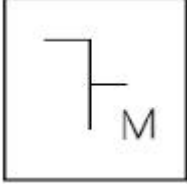


7155058033.

7155058034.



7155058035.

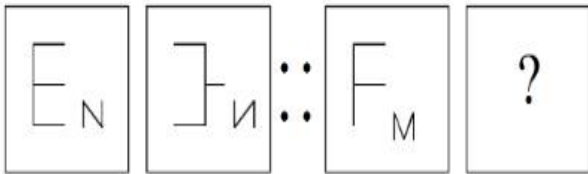


7155058036.

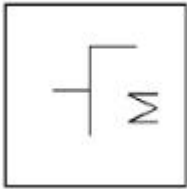
Question Number : 94 Question Id : 7155052557 Question Type : MCQ Option Shuffling : Yes Is Question Mandatory : No Calculator : None Response Time : N.A Think Time : N.A Minimum Instruction Time : 0

Correct Marks : 4 Wrong Marks : 1

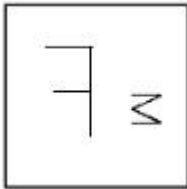
దత్త చిత్రంలో A మరియు B ఒక సంబంధం కలిగి ఉన్నాయి. C మరియు D ల మధ్య సారూప్య సంబంధం ఏర్పడేలా జవాబు చిత్రాన్ని గుర్తించండి.



Options :



7155058033.

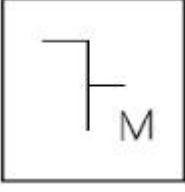


7155058034.

7155058035.



7155058036.



Question Number : 95 Question Id : 7155052558 Question Type : MCQ Option Shuffling : Yes Is Question Mandatory : No Calculator : None Response Time : N.A Think Time : N.A Minimum Instruction Time : 0

Correct Marks : 4 Wrong Marks : 1

The Housing Development Finance Corporation Limited (HDFC) was founded in:

Options :

7155058037. 1947

7155058038. 1961

7155058039. 1977

7155058040. 1981

Question Number : 95 Question Id : 7155052558 Question Type : MCQ Option Shuffling : Yes Is Question Mandatory : No Calculator : None Response Time : N.A Think Time : N.A Minimum Instruction Time : 0

Correct Marks : 4 Wrong Marks : 1

హౌసింగ్ డెవలప్ మెంట్ ఫైనాన్స్ కార్పొరేషన్ (HDFC) ఎప్పుడు స్థాపించారు ?

Options :

7155058037. 1947

7155058038. 1961

7155058039. 1977

7155058040. 1981

**Question Number : 96 Question Id : 7155052559 Question Type : MCQ Option Shuffling : Yes Is
Question Mandatory : No Calculator : None Response Time : N.A Think Time : N.A Minimum
Instruction Time : 0**

Correct Marks : 4 Wrong Marks : 1

An essential feature of federal government is:

Options :

7155058041. Centralisation of Powers

7155058042. Division of Powers between various levels

7155058043. Opposition

7155058044. Unwritten Constitution

**Question Number : 96 Question Id : 7155052559 Question Type : MCQ Option Shuffling : Yes Is
Question Mandatory : No Calculator : None Response Time : N.A Think Time : N.A Minimum
Instruction Time : 0**

Correct Marks : 4 Wrong Marks : 1

ఫెడరల్ ప్రభుత్వ ముఖ్య లక్షణమేమిటి?

Options :

7155058041. అధికార కేంద్రీకరణ

7155058042. వివిధ స్టాయిలలో అధికార విభజన

7155058043. ప్రతిపక్షం

7155058044. రాయబడని రాజ్యాంగం

Question Number : 97 Question Id : 7155052560 Question Type : MCQ Option Shuffling : Yes Is Question Mandatory : No Calculator : None Response Time : N.A Think Time : N.A Minimum Instruction Time : 0

Correct Marks : 4 Wrong Marks : 1

Which of the following is not a public sector bank?

Options :

7155058045. ICICI

7155058046. State Bank of India

7155058047. Indian Bank

7155058048. Canara Bank

Question Number : 97 Question Id : 7155052560 Question Type : MCQ Option Shuffling : Yes Is Question Mandatory : No Calculator : None Response Time : N.A Think Time : N.A Minimum Instruction Time : 0

Correct Marks : 4 Wrong Marks : 1

కింది వాటిలో ప్రజారంగ బ్యాంకు కానిది ఏది?

Options :

7155058045. ICICI

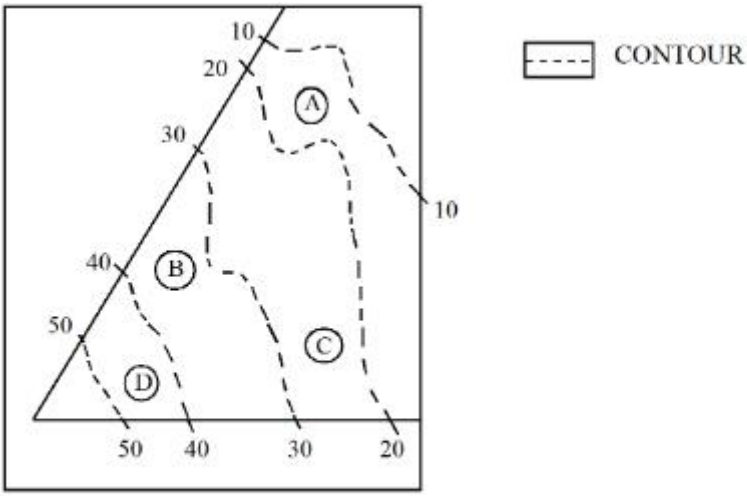
7155058046. స్టేట్ బ్యాంక్ ఆఫ్ ఇండియా

7155058047. ఇండియన్ బ్యాంక్

7155058048. కనరా బ్యాంక్

Question Number : 98 Question Id : 7155052561 Question Type : MCQ Option Shuffling : Yes Is Question Mandatory : No Calculator : None Response Time : N.A Think Time : N.A Minimum Instruction Time : 0

Correct Marks : 4 Wrong Marks : 1



In the given diagram, the location of D on the site is:

Options :

7155058049. 30-40

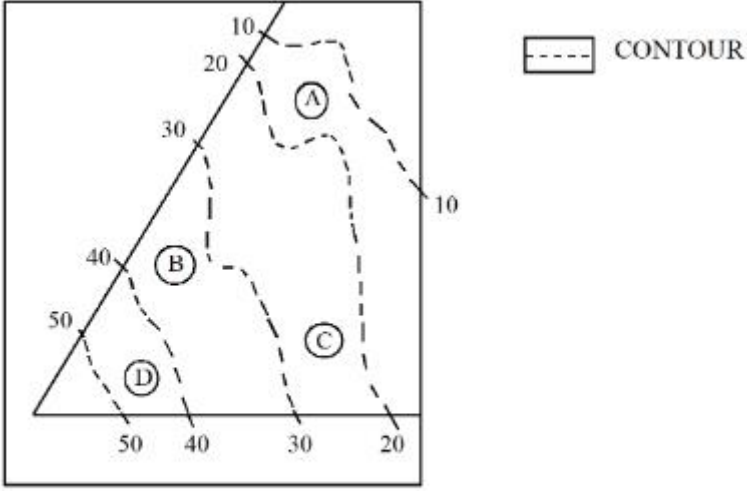
7155058050. 40-50

7155058051. 10-20

7155058052. 20-30

Question Number : 98 Question Id : 7155052561 Question Type : MCQ Option Shuffling : Yes Is Question Mandatory : No Calculator : None Response Time : N.A Think Time : N.A Minimum Instruction Time : 0

Correct Marks : 4 Wrong Marks : 1



దత్త పఠంలో, స్థలంలో D యొక్క స్థానం

Options :

7155058049. 30-40

7155058050. 40-50

7155058051. 10-20

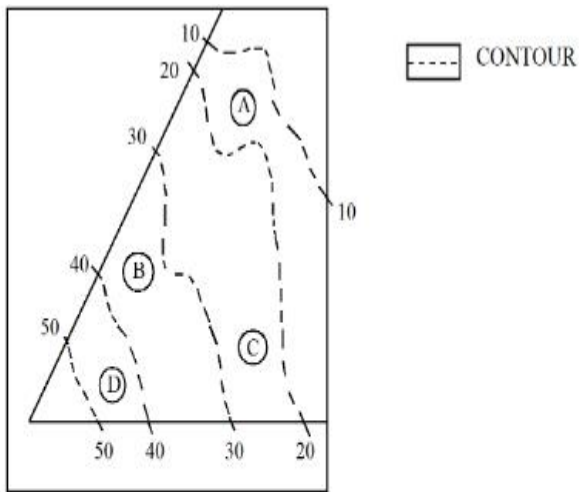
7155058052. 20-30

Question Number : 99 Question Id : 7155052562 Question Type : MCQ Option Shuffling : Yes Is

Question Mandatory : No Calculator : None Response Time : N.A Think Time : N.A Minimum

Instruction Time : 0

Correct Marks : 4 Wrong Marks : 1



Statement I: In the given diagram, the location of B is higher than C

Statement II: In the given diagram, the location of A is lower than C

In the light of the above statements, choose the *correct* answer from the options given below:

Options :

7155058053. Both Statement **I** and Statement **II** are true

7155058054. Both Statement **I** and Statement **II** are false

7155058055. Statement **I** is true but Statement **II** is false

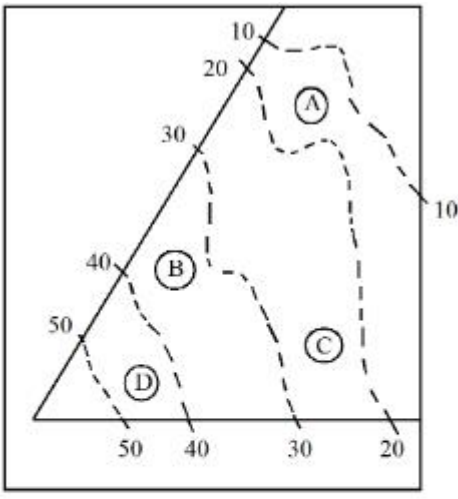
7155058056. Statement **I** is false but Statement **II** is true

Question Number : 99 Question Id : 7155052562 Question Type : MCQ Option Shuffling : Yes Is

Question Mandatory : No Calculator : None Response Time : N.A Think Time : N.A Minimum

Instruction Time : 0

Correct Marks : 4 Wrong Marks : 1



----- CONTOUR

ప్రకటన I: దత్త పఠంలో, B స్థానం C కన్నా ఎక్కువ

ప్రకటన II: దత్త పఠంలో, A స్థానం C కన్నా తక్కువ

పై ప్రకటనల ఆధారంగా సరైన జవాబు ఎన్నుకోండి

Options :

7155058053. ప్రకటన I మరియు ప్రకటన II రెండూ నిజం

7155058054. ప్రకటన I మరియు ప్రకటన II రెండూ అబద్ధం

7155058055. ప్రకటన I నిజం కాని ప్రకటన II అబద్ధం

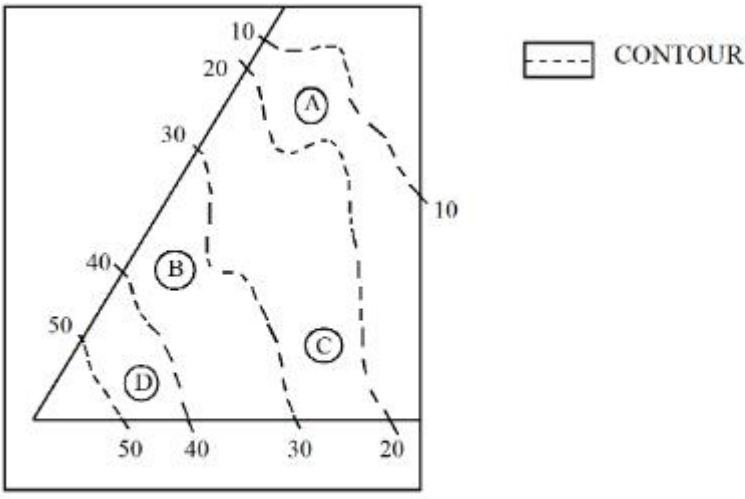
7155058056. ప్రకటన I అబద్ధం కాని ప్రకటన II నిజం

Question Number : 100 Question Id : 7155052563 Question Type : MCQ Option Shuffling : Yes

Is Question Mandatory : No Calculator : None Response Time : N.A Think Time : N.A

Minimum Instruction Time : 0

Correct Marks : 4 Wrong Marks : 1



In the given diagram, the location of the A lies on which contour ?

Options :

7155058057. 20-30

7155058058. 30-40

7155058059. 10-20

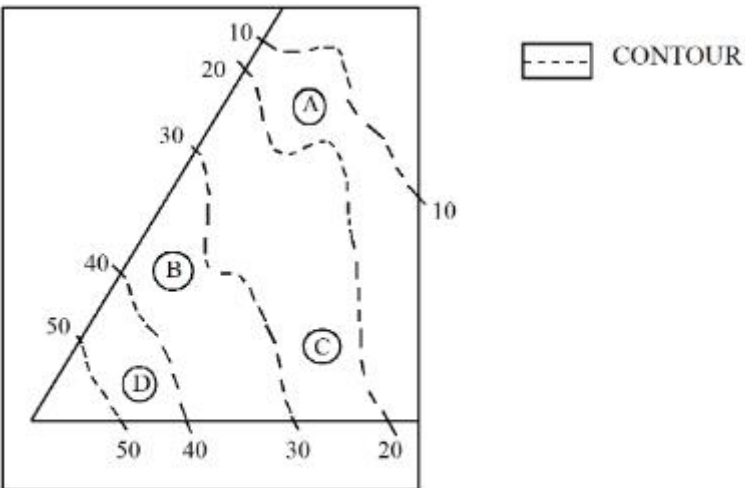
7155058060. 40-50

Question Number : 100 Question Id : 7155052563 Question Type : MCQ Option Shuffling : Yes

Is Question Mandatory : No Calculator : None Response Time : N.A Think Time : N.A

Minimum Instruction Time : 0

Correct Marks : 4 Wrong Marks : 1



దత్త పఠంలో, A స్థానం ఏ పరిధి రేఖపై ఉంది?

Options :

7155058057. 20-30

7155058058. 30-40

7155058059. 10-20

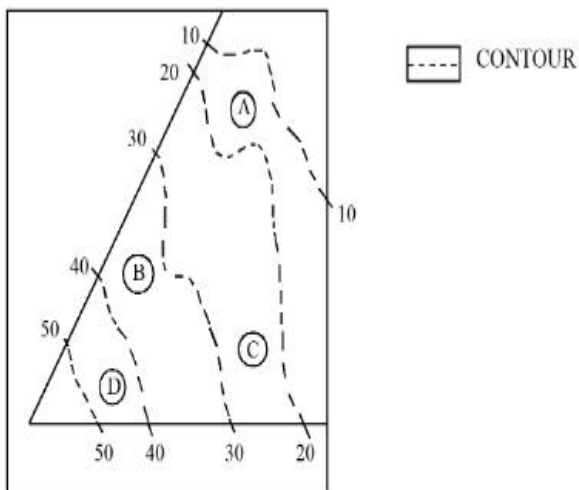
7155058060. 40-50

Question Number : 101 Question Id : 7155052564 Question Type : MCQ Option Shuffling : Yes

Is Question Mandatory : No Calculator : None Response Time : N.A Think Time : N.A

Minimum Instruction Time : 0

Correct Marks : 4 Wrong Marks : 1



Statement I: 'A' is located at the lowest point of the site.

Statement II: 'A' is located at a lower point than 'B' on the site.

In the light of the above statements, choose the *correct* answer from the options given below:

Options :

7155058061. Both Statement **I** and Statement **II** are true

7155058062. Both Statement **I** and Statement **II** are false

7155058063. Statement **I** is true but Statement **II** is false

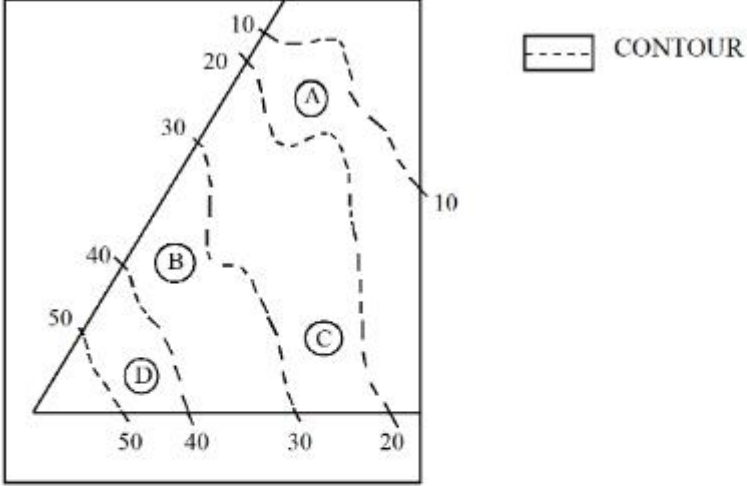
7155058064. Statement **I** is false but Statement **II** is true

Question Number : 101 Question Id : 7155052564 Question Type : MCQ Option Shuffling : Yes

Is Question Mandatory : No Calculator : None Response Time : N.A Think Time : N.A

Minimum Instruction Time : 0

Correct Marks : 4 Wrong Marks : 1



ప్రకటన I: స్థలం కనీస స్థాయిలో A స్థానం ఉంది

ప్రకటన II: స్థలంలో 'B' కన్నా తక్కువ స్థాయిలో A స్థానం ఉంది.

పై ప్రకటనల ఆధారంగా సరైన జవాబు ఎన్నుకోండి.

Options :

7155058061. ప్రకటన **I** మరియు ప్రకటన **II** రెండూ నిజం

7155058062. ప్రకటన **I** మరియు ప్రకటన **II** రెండూ అబద్ధం

7155058063. ప్రకటన **I** నిజం కాని ప్రకటన **II** అబద్ధం

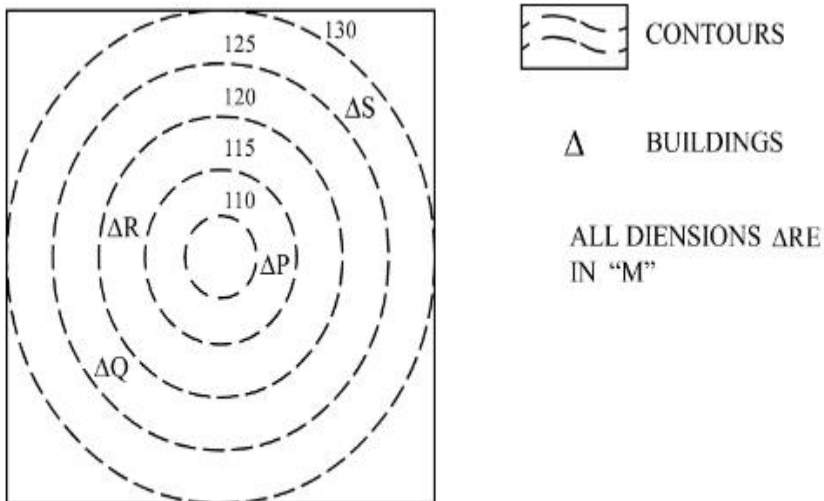
7155058064. ప్రకటన **I** అబద్ధం కాని ప్రకటన **II** నిజం

Question Number : 102 Question Id : 7155052565 Question Type : MCQ Option Shuffling : Yes

Is Question Mandatory : No Calculator : None Response Time : N.A Think Time : N.A

Minimum Instruction Time : 0

Correct Marks : 4 Wrong Marks : 1



In the given diagram, how many contour levels are present in between "P" and "S"

Options :

7155058065. 2

7155058066. 3

7155058067. 1

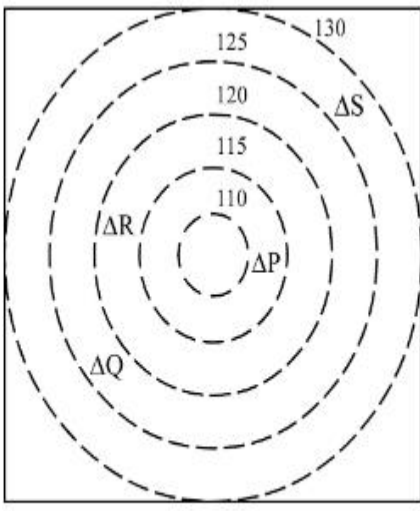
7155058068. 4

Question Number : 102 Question Id : 7155052565 Question Type : MCQ Option Shuffling : Yes

Is Question Mandatory : No Calculator : None Response Time : N.A Think Time : N.A

Minimum Instruction Time : 0

Correct Marks : 4 Wrong Marks : 1



 CONTOURS

 BUILDINGS

ALL DIENSIONS ARE
IN "M"

దత్త పఠంలో, "P" మరియు "S" ల మధ్య ఎన్ని పరిధిరేఖల స్థాయిలు ఉన్నాయి?

Options :

7155058065. 2

7155058066. 3

7155058067. 1

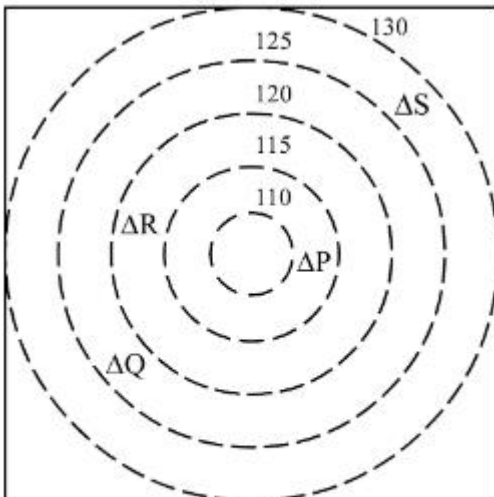
7155058068. 4


Question Number : 103 Question Id : 7155052566 Question Type : MCQ Option Shuffling : Yes

Is Question Mandatory : No Calculator : None Response Time : N.A Think Time : N.A

Minimum Instruction Time : 0

Correct Marks : 4 Wrong Marks : 1



 CONTOURS

 BUILDINGS

ALL DIENSIONS ARE
IN "M"

In the given diagram, "S" is higher than _____ meter from "R"

Options :

7155058069. 5

7155058070. 10

7155058071. 25

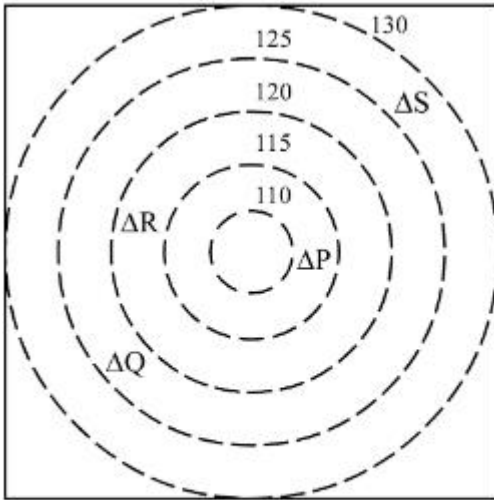
7155058072. 15


Question Number : 103 Question Id : 7155052566 Question Type : MCQ Option Shuffling : Yes


Is Question Mandatory : No Calculator : None Response Time : N.A Think Time : N.A

Minimum Instruction Time : 0

Correct Marks : 4 Wrong Marks : 1



 CONTOURS

 BUILDINGS

ALL DIENSIONS ARE
IN "M"

దత్త పఠంలో, "R" నుండి _____ మీటర్ల ఎత్తులో "S" ఉంది ?

Options :

7155058069. 5

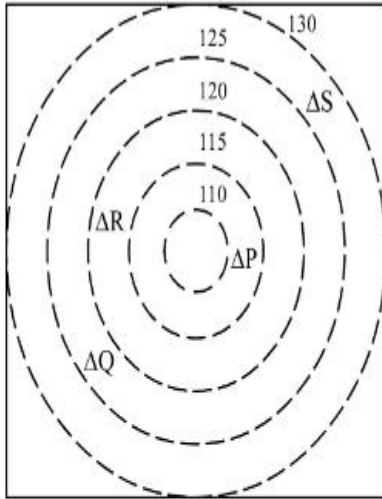
7155058070. 10

7155058071. 25

7155058072. 15

Question Number : 104 Question Id : 7155052567 Question Type : MCQ Option Shuffling : Yes
Is Question Mandatory : No Calculator : None Response Time : N.A Think Time : N.A
Minimum Instruction Time : 0

Correct Marks : 4 Wrong Marks : 1



 CONTOURS

 BUILDINGS

ALL DIENSIONS ARE
IN "M"

Based on the given diagram:

Statement I : "R" is higher than "P" and "Q"

Statement II : "S" is higher than "P", "Q" and "R"

In the light of the above statements, choose the *correct* answer from the options given below:

Options :

7155058073. Both Statement **I** and Statement **II** are true

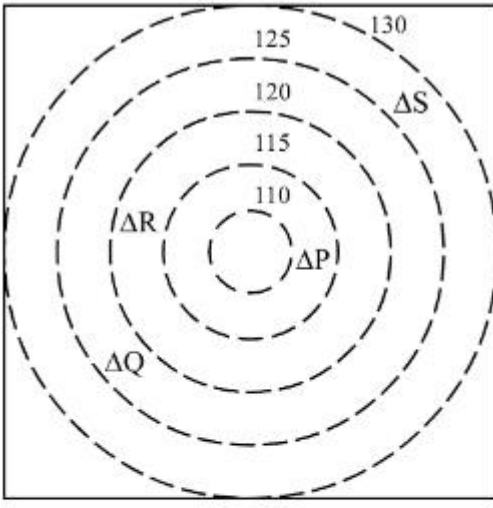
7155058074. Both Statement **I** and Statement **II** are false

7155058075. Statement **I** is true but Statement **II** is false

7155058076. Statement **I** is false but Statement **II** is true

Question Number : 104 Question Id : 7155052567 Question Type : MCQ Option Shuffling : Yes
Is Question Mandatory : No Calculator : None Response Time : N.A Think Time : N.A
Minimum Instruction Time : 0

Correct Marks : 4 Wrong Marks : 1



CONTOURS

Δ BUILDINGS

ALL DIENSIONS ARE
IN "M"

పఠం ప్రకారం:

ప్రకటన I : "P" మరియు "Q" ల కన్నా ఎత్తులో "R" ఉంది

ప్రకటన II : "P" , "Q" మరియు "R" ల కన్నా ఎత్తులో "S" ఉంది.

పై ప్రకటనల ఆధారంగా సరైన జవాబు ఎన్నుకోండి.

Options :

7155058073. ప్రకటన I మరియు ప్రకటన II రెండూ నిజం

7155058074. ప్రకటన I మరియు ప్రకటన II రెండూ అబద్ధం

7155058075. ప్రకటన I నిజం కాని ప్రకటన II అబద్ధం

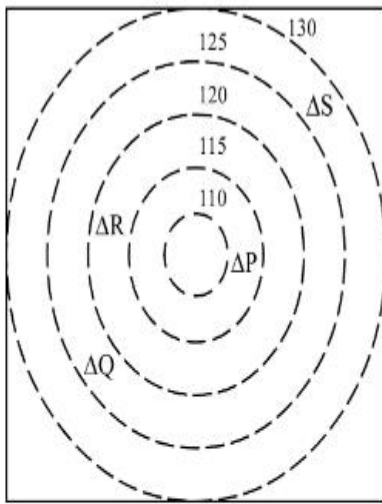
7155058076. ప్రకటన I అబద్ధం కాని ప్రకటన II నిజం

Question Number : 105 Question Id : 7155052568 Question Type : MCQ Option Shuffling : Yes

Is Question Mandatory : No Calculator : None Response Time : N.A Think Time : N.A

Minimum Instruction Time : 0

Correct Marks : 4 Wrong Marks : 1



 CONTOURS

 BUILDINGS

ALL DIENSIONS ARE
IN "M"

Based on the given diagram:

Statement I : "P" is located at a height of 110 M

Statement II : "Q" is located 5 M lower than "S"

In the light of the above statements, choose the *correct* answer from the options given below:

Options :

7155058077. Both Statement **I** and Statement **II** are true

7155058078. Both Statement **I** and Statement **II** are false

7155058079. Statement **I** is true but Statement **II** is false

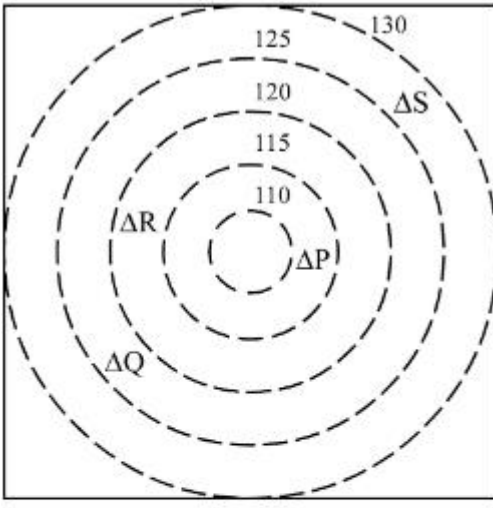
7155058080. Statement **I** is false but Statement **II** is true

Question Number : 105 Question Id : 7155052568 Question Type : MCQ Option Shuffling : Yes

Is Question Mandatory : No Calculator : None Response Time : N.A Think Time : N.A

Minimum Instruction Time : 0

Correct Marks : 4 Wrong Marks : 1



CONTOURS

Δ BUILDINGS

ALL DIENSIONS ARE
IN "M"

పఠం ప్రకారం :

ప్రకటన I : "P", 110m ల ఎత్తులో ఉంది.

ప్రకటన II : "S" కంటే 5m తక్కువలో "Q" ఉంది.

పై ప్రకటనల ఆధారంగా సరైన జవాబు ఎన్నుకోండి.

Options :

7155058077. ప్రకటన I మరియు ప్రకటన II రెండూ నిజం

7155058078. ప్రకటన I మరియు ప్రకటన II రెండూ అబద్ధం

7155058079. ప్రకటన I నిజం కాని ప్రకటన II అబద్ధం

7155058080. ప్రకటన I అబద్ధం కాని ప్రకటన II నిజం