

National Testing Agency

Question Paper Name : General MBA Eng 23rd June 2023 Shift 2
Subject Name : General MBA Eng
Creation Date : 2023-07-06 17:06:09
Duration : 120
Total Marks : 400
Display Marks: Yes

General MBA etc

Group Number : 1
Group Id : 686340361
Group Maximum Duration : 0
Group Minimum Duration : 120
Show Attended Group? : No
Edit Attended Group? : No
Break time : 0
Group Marks : 400
Is this Group for Examiner? : No
Examiner permission : Cant View
Show Progress Bar? : No

General MBA etc

Section Id : 686340719
Section Number : 1
Section type : Online
Mandatory or Optional : Mandatory
Number of Questions : 80
Number of Questions to be attempted : 80
Section Marks : 400
Enable Mark as Answered Mark for Review and Clear Response : Yes
Maximum Instruction Time : 0
Sub-Section Number : 1
Sub-Section Id : 6863401199
Question Shuffling Allowed : No
Is Section Default? : null

**Question Id : 68634036459 Question Type : COMPREHENSION Sub Question Shuffling Allowed : Yes Group
Comprehension Questions : No Question Pattern Type : NonMatrix Calculator : None Response Time : N.A Think Time
: N.A Minimum Instruction Time : 0
Question Numbers : (1 to 5)
Question Label : Comprehension**

Read the following passage and answer the required questions:

I walked into a popular restaurant recently and heard someone talking in a very loud voice. I was intrigued because this is a good restaurant which most people enjoy eating at very much. The staff are helpful and courteous, the food is delicious, and the people who come there are, for the most part, regulars. You can thus imagine my surprise when I heard a loud, angry voice booming from a table nearby. Now, I'm a curious person by nature, so I walked over to the nearest table I could get to. I walked over to the nearest table I could get to. I saw a guest frantically, gesticulating both at the server as well as his food. His body language was screaming anger and indignation, as were his facial expressions. He was very loudly telling the server how he was paying for good food and therefore he demanded nothing but the best, as well as the highest order of respect. He mentioned that he was a food critic on an online forum and that he would write an honest review of the restaurant. I zoned out of his tirade and looked around at the other people there to grab a (usually) happy lunch. Nearly everyone was staring at the guest, some with a look of disbelief. Would you like dealing with someone as aggressive as him? There is an important difference between being aggressive and being assertive. While aggressive communication makes people withdraw from you and want to avoid you assertiveness makes people want to follow you. Add to this the art of persuasion and you have a winning combination.

Sub questions

Question Number : 1 Question Id : 68634036460 Question Type : MCQ Option Shuffling : No Is Question Mandatory : No Calculator : None Response Time : N.A Think Time : N.A Minimum Instruction Time : 0 Correct Marks : 4 Wrong Marks : 1

Choose the word similar in meaning to the word, "tirade."

1. Threatening speech
2. Criticism and accusation
3. Emergetic oration
4. Assertive conversation

Options :

- 686340144001. 1
- 686340144002. 2
- 686340144003. 3
- 686340144004. 4

Question Number : 2 Question Id : 68634036461 Question Type : MCQ Option Shuffling : No Is Question Mandatory : No Calculator : None Response Time : N.A Think Time : N.A Minimum Instruction Time : 0 Correct Marks : 4 Wrong Marks : 1

The story narrated in the passage teaches us to be:

1. Polite
2. Agressive
3. Demanding
4. Persuasive

Options :

- 686340144005. 1
- 686340144006. 2
- 686340144007. 3
- 686340144008. 4

Question Number : 3 Question Id : 68634036462 Question Type : MCQ Option Shuffling : No Is Question Mandatory : No Calculator : None Response Time : N.A Think Time : N.A Minimum Instruction Time : 0 Correct Marks : 4 Wrong Marks : 1

Which of the following is /are correct as per the passage:

- A. The guest in the restaurant was treating the waiter.
- B. The guest in the restaurant was demanding only good food.
- C. Everyone present in the restaurant considered the guest as an aggressive person.
- D. The guest was aggressive as well as assertive.

Choose the correct answer from the options given below:

- 1. A and C are correct
- 2. B and D are correct
- 3. D is correct
- 4. C is correct

Options :

- 686340144009. 1
- 686340144010. 2
- 686340144011. 3
- 686340144012. 4

Question Number : 4 Question Id : 68634036463 Question Type : MCQ Option Shuffling : No Is Question Mandatory : No Calculator : None Response Time : N.A Think Time : N.A Minimum Instruction Time : 0 Correct Marks : 4 Wrong Marks : 1

Match List I with List II

LIST I		LIST II	
A.	Aggressiveness	I.	People follow you
B.	Assertiveness	II.	A winning element
C.	Persuasiveness	III.	Refined
D.	Politeness	IV.	People withdraw from you

Choose the correct answer from the options given below:

- 1. A-IV, B-I, C-II, D-III
- 2. A-III, B-IV, C-I, D-IV
- 3. A-II, B-III, C-IV, D-II
- 4. A-I, B-II, C-III, D-IV

Options :

686340144013. 1
686340144014. 2
686340144015. 3
686340144016. 4

Question Number : 5 Question Id : 68634036464 Question Type : MCQ Option Shuffling : No Is Question Mandatory : No Calculator : None Response Time : N.A Think Time : N.A Minimum Instruction Time : 0 Correct Marks : 4 Wrong Marks : 1

What does 'winning combination' in the story include?

1. Agressive and Assertive
2. Polite andf Persuasive
3. Assertive and Persuasive
4. Aggressive and Persuasive

Options :

686340144017. 1
686340144018. 2
686340144019. 3
686340144020. 4

Question Id : 68634036459 Question Type : COMPREHENSION Sub Question Shuffling Allowed : Yes Group Comprehension Questions : No Question Pattern Type : NonMatrix Calculator : None Response Time : N.A Think Time : N.A Minimum Instruction Time : 0

Question Numbers : (1 to 5)

Question Label : Comprehension

गद्यांश के आधार पर निम्नलिखित प्रश्नों का सटीक उत्तर दीजिए-

जब सब लोग अपने-अपने घर चले गए, तो धनिया हारी को कोसने लगी - तुम्हें कोई लाख समझाए, करोगे अपने मन की। तुम गाय खोलकर आँगन से चले, तब तक मैं जूझती रही कि बाहर न ले जाओ। हमारे दिन पतले हैं, न जाने कब क्या हो जाए; लेकिन नहीं, उसे गर्मी लग रही है। अब तो खूब ठण्डी हो गई और तुम्हारा कलेजा भी ठण्डा हो गया। ठाकुर माँगते थे; दे दिया होता, तो एक बोझ सिर से उतर जाता और निहोरा का निहोरा होता; मगर यह तमाचा कैसे पड़ता? कोई बुरी बात होने वाली होती है, तो मति पहले ही हर जाती है। इतने दिन मजे से घर में बँधती रही; न गर्मी लगी, न जूड़ी आई। इतनी जल्दी सबको पहचान गई थी कि मालूम ही न होता था कि बाहर से आई है। बच्चे उसके सींगों से खेलते रहते थे। सिर तक न हिलाती थी। जो कुछ नाँद में डाल दो, चाट पोंछकर साफ कर देती थी। लच्छमी थी, अभागों के घर क्या रहती? सोना और रूपा भी यह हलचल सुनकर जाग गई थीं और बिलख-बिलखर रो रही थीं। उसकी सेवा का भार अधिकतर उन्हीं दोनों पर था। उनकी संगिनी हो गई थी। दोनों खाकर उठतीं, तो एक-एक टुकड़ा रोटी उसे अपने हाथों से खिलातीं। कैसा जीभ निकालकार खा लेती थी, और जह तक उनके हाथ का कौर न पा लेती, खड़ी ताकती रहती। भाग्य फूट गए!

Sub questions

Question Number : 1 Question Id : 68634036460 Question Type : MCQ Option Shuffling : No Is Question Mandatory : No Calculator : None Response Time : N.A Think Time : N.A Minimum Instruction Time : 0 Correct Marks : 4 Wrong Marks : 1

कैसी बात से पहले मति हर जाती है-

1. अच्छी बात
2. बुरी बात
3. कड़वी बात
4. कच्ची बात

Options :

686340144001. 1
686340144002. 2
686340144003. 3
686340144004. 4

Question Number : 2 Question Id : 68634036461 Question Type : MCQ Option Shuffling : No Is Question Mandatory : No Calculator : None Response Time : N.A Think Time : N.A Minimum Instruction Time : 0

Correct Marks : 4 Wrong Marks : 1

सोना और रूपा क्यों जग गयीं ?

1. गाय के जाने के कारण
2. बारिश होने के कारण
3. सुबह होने के कारण
4. इनमें से कोई नहीं

Options :

686340144005. 1
686340144006. 2
686340144007. 3
686340144008. 4

Question Number : 3 Question Id : 68634036462 Question Type : MCQ Option Shuffling : No Is Question Mandatory : No Calculator : None Response Time : N.A Think Time : N.A Minimum Instruction Time : 0

Correct Marks : 4 Wrong Marks : 1

होरी को कौन कोसने लगा-

1. गोबर
2. सोना
3. रूपा
4. धनिया

Options :

686340144009. 1
686340144010. 2
686340144011. 3
686340144012. 4

**Question Number : 4 Question Id : 68634036463 Question Type : MCQ Option Shuffling : No Is Question Mandatory :
No Calculator : None Response Time : N.A Think Time : N.A Minimum Instruction Time : 0
Correct Marks : 4 Wrong Marks : 1**

गद्यांश के आधार पर निम्न शब्दों को क्रम के अनुसार लगाइये:

- A. ठाकुर
- B. गर्मी
- C. संगिनी
- D. लच्छमी
- E. भाग्य

नीचे दिए गए विकल्पों में से सही उत्तर का चयन कीजिए:

- 1. E, D, A, C, B
- 2. A, B, C, D, E
- 3. B, A, D, C, E
- 4. B, A, D, E, C

Options :

686340144013. 1
686340144014. 2
686340144015. 3
686340144016. 4

**Question Number : 5 Question Id : 68634036464 Question Type : MCQ Option Shuffling : No Is Question Mandatory :
No Calculator : None Response Time : N.A Think Time : N.A Minimum Instruction Time : 0
Correct Marks : 4 Wrong Marks : 1**

होरी, धनिया, सोना और रूपा किस उपन्यास के पात्र हैं -

- 1. निर्मला
- 2. गोदान
- 3. कर्मभूमि
- 4. रंगभूमि

Options :

686340144017. 1

686340144018. 2

686340144019. 3

686340144020. 4

Sub-Section Number : 2
Sub-Section Id : 6863401200
Question Shuffling Allowed : No
Is Section Default? : null

Question Id : 68634036465 Question Type : COMPREHENSION Sub Question Shuffling Allowed : Yes Group Comprehension Questions : No Question Pattern Type : NonMatrix Calculator : None Response Time : N.A Think Time : N.A Minimum Instruction Time : 0

Question Numbers : (6 to 10)

Question Label : Comprehension

Read the passage below and answer the questions that follow:

Did you know that your daily habits can turn genes on or off. It's known as gene expression or epigenetics. Gene expression is a process in which certain genes are turned on or off during one's lifetime. The human body contains approximately 100 trillion cells. Within each cell is the nucleus. Inside every nucleus of every cell are our genes. Experts estimate that the average human has over 20,000 genes. Some of these genes came from our mothers and some from our fathers.

Believe it or not, your daily habits can turn genes on or off. Bad habits can turn off good genes and turn on bad genes. This could mean opening the door to cancer, diabetes, various addictions, brain damage, heart diseases, etc. Bad habits can create long-term stress in the form of financial problems, job loss, health issues, etc. Long-term stress increases the production of cortisol, a stress hormone. Like a domino effect, cortisol switches on a series of bad genes that can lead to heart disease, cancer and immunological disorders.

Some of the bad habits that turn bad genes on include:

- Excessive alcohol consumption.
- Drug use.
- Not eating healthy or eating too much junk food can change your DNA.
- Lack off daily aerobic exercise.
- Consuming too much much sugar.
- Not exercising our brains by reading or learning new skills.
- Negative emotions and negative thinking.

Conversely, good habits can turn bad genes off and turn good genes on. The by product of good habits is reduced stress resulting from financial independence, happiness, good health, etc. Some of these good habits include:

- Daily reading or learning new skills, which can turn on genes that increase your IQ.
- Daily aerobic exercise, which can turn on genes that prevent heart disease, asthma and other immunological disorder.
- Meditation, which can turn off bad genes that contribute to the onset of various types of diseases and turn on good genes that prevent such disease.
- Positive thinking and positive emotions alter the brain's chemistry which increases or decreases gene expression.

Habits are not harmless. They can alter your DNA by changing your genome. This is important but not just for

Sub questions

Question Number : 6 Question Id : 68634036466 Question Type : MCQ Option Shuffling : No Is Question Mandatory : No Calculator : None Response Time : N.A Think Time : N.A Minimum Instruction Time : 0 Correct Marks : 4 Wrong Marks : 1

Match List I with List II

LIST I		LIST II	
A.	Gene Expression	I.	Changing of genome
B.	Cortisol	II.	Turns on a series of bad genes
C.	Reduced stress	III.	A process of lifetime
D.	DNA	IV.	A by product of good habits

Choose the correct answer from the options given below:

1. A-III, B-II, C-IV, D-I
2. A-IV, B-III, C-I, D-II
3. A-I, B-II, C-III, D-IV
4. A-II, B-I, C-II, D-III

Options :

- 686340144021. 1
- 686340144022. 2
- 686340144023. 3
- 686340144024. 4

Question Number : 7 Question Id : 68634036467 Question Type : MCQ Option Shuffling : No Is Question Mandatory : No Calculator : None Response Time : N.A Think Time : N.A Minimum Instruction Time : 0 Correct Marks : 4 Wrong Marks : 1

Choose the statement that are true with regard to your DNA.

- A. It results into immunological disorder.
- B. The altered DNA gets passed on the our children.
- C. Habits are harmful.
- D. The DNA has the ability to change the genome.
- E. The DNA can make you children better or worse.

Choose the correct answer from the options given below:

1. A, B, C, D only
2. B, C, E, D only
3. A, B, C, E only
4. A, B, D, E only

Options :

- 686340144025. 1
- 686340144026. 2
- 686340144027. 3
- 686340144028. 4

Question Number : 8 Question Id : 68634036468 Question Type : MCQ Option Shuffling : No Is Question Mandatory : No Calculator : None Response Time : N.A Think Time : N.A Minimum Instruction Time : 0 Correct Marks : 4 Wrong Marks : 1

Epileptics is a process:

1. in which certain genes are turned on during one's lifetime.
2. in which certain genes remain unchanged.
3. in which daily habits do not play a par.
4. in which certain genes are turned on or off.

Options :

- 686340144029. 1
- 686340144030. 2
- 686340144031. 3
- 686340144032. 4

Question Number : 9 Question Id : 68634036469 Question Type : MCQ Option Shuffling : No Is Question Mandatory : No Calculator : None Response Time : N.A Think Time : N.A Minimum Instruction Time : 0 Correct Marks : 4 Wrong Marks : 1

Financial problems, job loss, health issues etc. are caused by:

1. turning on the good genes.
2. decreasing the production of cortisol, a stress hormone.
3. bad habits which can create ling-term stress.
4. immunological disorders.

Options :

- 686340144033. 1
- 686340144034. 2
- 686340144035. 3
- 686340144036. 4

Question Number : 10 Question Id : 68634036470 Question Type : MCQ Option Shuffling : No Is Question Mandatory : No Calculator : None Response Time : N.A Think Time : N.A Minimum Instruction Time : 0 Correct Marks : 4 Wrong Marks : 1

Consuming too much sugar implies:

1. a bad habit that turns bad gene on.
2. a bad that turns good gene on.
3. a bad habit develops negative thinking.
4. reduced stress levels.

Options :

686340144037. 1
686340144038. 2
686340144039. 3
686340144040. 4

Question Id : 68634036465 Question Type : COMPREHENSION Sub Question Shuffling Allowed : Yes Group Comprehension Questions : No Question Pattern Type : NonMatrix Calculator : None Response Time : N.A Think Time : N.A Minimum Instruction Time : 0

Question Numbers : (6 to 10)

Question Label : Comprehension

निम्नलिखित गद्यांश को पढ़कर निम्न लिखित प्रश्नों के उत्तर दीजिए-

यानी कविता में जीवन में जीवन और परिस्थितियों के विवरणों का चुनाव अच्छा और गहनतर होता है। कथा-साहित्य विशेष कर उपन्यास युग और जीवन की सामाजिक राजनीतिक, आर्थिक और धार्मिक परिस्थितियों को भी चित्रित करता है। अब यह समझ में आ सकता है कि कविता में सर्वाधिक बल भाव पर होता है कथा-साहित्य का बल परिस्थितियों के पेंचों पर और नाटक का बल कार्य पर होता है। भाव, परिस्थिति और कार्य, तीनों प्रकार की रचनाओं में होते हैं। उनमें विधागत अंतर बल से आता है। इस प्रकार साहित्य की विधाओं में अंतर तत्व के कारण नहीं, बल देने के रवैये के कारण आता है।

हम सब जानते हैं कि जीवन में अवांछित परिस्थितियाँ ज्यादा होती हैं। मनुष्य का जीवन उनमें घिरा होता है। मानवीय संबंध और भाव को उनके भीतर टोहना पड़ता है। कविता मुख्य रूप से परिस्थितियों के भीतर भाव की खोज करती है। साहित्य की दूसरी विधाएँ, अनचाही लेकिन अनिवार्य परिस्थितियों की अधिकता से ज्यादा उलझती हैं। दूसरे शब्दों में कविता का क्षेत्र जीवन के लिए वांछित वस्तु के अभाव की पीड़ा है। मोटे रूप में दूसरी विधाओं का क्षेत्र अवांछित परिस्थितियों की उपस्थिति से पैदा होने वाली बेचैनी है।

Sub questions

Question Number : 6 Question Id : 68634036466 Question Type : MCQ Option Shuffling : No Is Question Mandatory : No Calculator : None Response Time : N.A Think Time : N.A Minimum Instruction Time : 0

Correct Marks : 4 Wrong Marks : 1

उपर्युक्त गद्यांश के अनुसार अवांछित परिस्थितियों का क्या अर्थ है?

1. अनुकूल स्थितियां
2. अनचाही स्थितियां
3. अनिवार्य स्थितियां
4. अनुरूप स्थितियां

Options :

686340144021. 1
686340144022. 2
686340144023. 3
686340144024. 4

Question Number : 7 Question Id : 68634036467 Question Type : MCQ Option Shuffling : No Is Question Mandatory : No Calculator : None Response Time : N.A Think Time : N.A Minimum Instruction Time : 0

Correct Marks : 4 Wrong Marks : 1

उपर्युक्त गद्यांश के अनुसार कविता मुख्यतः किसकी खोज करती है?

1. भाव की खोज
2. आत्मा की खोज
3. व्यक्ति की खोज
4. साहित्य की खोज

Options :

686340144025. 1
686340144026. 2
686340144027. 3
686340144028. 4

Question Number : 8 Question Id : 68634036468 Question Type : MCQ Option Shuffling : No Is Question Mandatory : No Calculator : None Response Time : N.A Think Time : N.A Minimum Instruction Time : 0 Correct Marks : 4 Wrong Marks : 1

साहित्य को दूसरी विधाओं के सृजन का मुख्य कारण क्या है?

1. मेले में किसी का खो जाना
2. व्याकुलता का बढ़ना
3. अनचाही स्थितियों से उत्पन्न होने वाली बेचैनी
4. भीड़ भाड़ में घबराहट

Options :

686340144029. 1
686340144030. 2
686340144031. 3
686340144032. 4

Question Number : 9 Question Id : 68634036469 Question Type : MCQ Option Shuffling : No Is Question Mandatory : No Calculator : None Response Time : N.A Think Time : N.A Minimum Instruction Time : 0 Correct Marks : 4 Wrong Marks : 1

'सर्वाधिक' का संधि विच्छेद होगा-

1. सर्वा + अधिक
2. सव + अधिक
3. सर्वाध + इक
4. सर्व + अधिक

Options :

686340144033. 1
686340144034. 2
686340144035. 3
686340144036. 4

Question Number : 10 Question Id : 68634036470 Question Type : MCQ Option Shuffling : No Is Question Mandatory : No Calculator : None Response Time : N.A Think Time : N.A Minimum Instruction Time : 0

Correct Marks : 4 Wrong Marks : 1

समाज, राजनीति, अर्थ और धर्म का चित्रण किसमें होता है?

1. कविता में
2. काव्यशास्त्र में
3. कथा-साहित्य में
4. अर्थशास्त्र में

Options :

686340144037. 1
686340144038. 2
686340144039. 3
686340144040. 4

Sub-Section Number :	3
Sub-Section Id :	6863401201
Question Shuffling Allowed :	Yes
Is Section Default? :	null

Question Number : 11 Question Id : 68634036471 Question Type : MCQ Option Shuffling : No Is Question Mandatory : No Calculator : None Response Time : N.A Think Time : N.A Minimum Instruction Time : 0

Correct Marks : 4 Wrong Marks : 1

Read the passage below and answer the questions that follow:

The wise old Wazir was famous for his judgement and people came to him for justice from all parts of the country. One day two men came to his court and claimed ownership of an extraordinarily good-looking horse. It was a black beauty indeed. One of the men was tall, very well-dressed and soft-spoken. The Wazir heard them patiently and asked them to leave the horse and come to him next morning. Both the men came the next morning. The Wazir asked his soldiers to give the horse to the tall man and to arrest the other man. The tall man wanted to know how the Wazir had learnt the truth. "Very simple", said he, "Firstly, a man of your appearance and manners could not have been the thief. Still, I wanted to be sure, just after you had left the court. I asked one my soldiers to leave the horse free and to see whom it followed. It went after you. This hint was enough for me."

Which of the following is/are correct as per the given statement:

People came to which from all places because he was _____.

- A. very famous
- B. an old judge
- C. an old Wazir
- D. a very patient listener
- E. a wise judge

Choose the correct answer from the options given below:

- 1. A and E
- 2. B, C and D
- 3. E only
- 4. A and D only

Options :

- 686340144041. 1
- 686340144042. 2
- 686340144043. 3
- 686340144044. 4

Question Number : 11 Question Id : 68634036471 Question Type : MCQ Option Shuffling : No Is Question Mandatory : No Calculator : None Response Time : N.A Think Time : N.A Minimum Instruction Time : 0

Correct Marks : 4 Wrong Marks : 1

गद्यांश पढ़कर समुचित उत्तर दीजिए-

वाचक! प्रथम सर्वत्र ही 'जय जानकी जीवन' कहा फिर पूर्वजों के शील की शिक्षा-तरंगों में बहो। दुख, शोक, जब जो आ पड़े, सो पूर्वक सब सहो, होगी सफलता क्यों नहीं कर्तव्य पथ पर दृढ़ रहो। अधिकार खो कर बैठ रहना, यह ममहा दुष्कर्म है, न्यायार्थ अपने बन्धु को भी दण्ड देना धर्म है। इस तत्व पर ही कौरवों से पाण्डवों का रण हुआ, जो भव्य भारत वर्ष के कल्पान्त का कारण हुआ। जो भव्य भारतवर्ष के कल्पान्त का कारण हुआ। सब लोग हिलमिल कर चलो, पारस्परिक ईर्ष्या तजो, भारत न दुर्दिन देखता, मचता महाभारत न जो। हो स्वप्नतुल्य सदैव को सब शौर्य्य सहसा खो गया।

'वाचक' का अर्थ होगा-

- 1. बोलने वाला
- 2. डराने वाला
- 3. हसने वाला
- 4. सोने वाला

Options :

- 686340144041. 1
- 686340144042. 2

686340144043. 3

686340144044. 4

Question Number : 12 Question Id : 68634036472 Question Type : MCQ Option Shuffling : No Is Question Mandatory : No Calculator : None Response Time : N.A Think Time : N.A Minimum Instruction Time : 0 Correct Marks : 4 Wrong Marks : 1

Read the passage below and answer the questions that follow:

The wise old Wazir was famous for his judgement and people came to him for justice from all parts of the country. One day two men came to his court and claimed ownership of an extraordinarily good-looking horse. It was a black beauty indeed. One of the men was tall, very well-dressed and soft-spoken. The Wazir heard them patiently and asked them to leave the horse and come to him next morning. Both the men came the next morning. The Wazir asked his soldiers to give the horse to the tall man and to arrest the other man. The tall man wanted to know how the Wazir had learnt the truth. "Very simple", said he, "Firstly, a man of your appearance and manners could not have been the thief. Still, I wanted to be sure, just after you had left the court. I asked one my soldiers to leave the horse free and to see whom it followed. It went after you. This hint was enough for me."

This story proves that:

- A. the court was quite were very smart
- B. the judge was very clever
- C. the horse was very clever
- D. the horse was a real beauty
- E. the judge was indeed quite wise and intelligent

Choose the correct answer from the options given below:

- 1. A, E, D
- 2. B, C, E and D
- 3. D only
- 4. E only

Options :

686340144045. 1

686340144046. 2

686340144047. 3

686340144048. 4

Question Number : 12 Question Id : 68634036472 Question Type : MCQ Option Shuffling : No Is Question Mandatory : No Calculator : None Response Time : N.A Think Time : N.A Minimum Instruction Time : 0 Correct Marks : 4 Wrong Marks : 1

गद्यांश पढ़कर समुचित उत्तर दीजिए-

वाचक! प्रथम सर्वत्र ही 'जय जानकी जीवन' कहा फिर पूर्वजों के शील की शिक्षा-तरंगों में बहो। दुख, शोक, जब जो आ पडे, सो पूर्वक सब सहो, होगी सफलता क्यों नहीं कर्तव्य पथ पर दृढ़ रहो। अधिकार खो कर बैठ रहना, यह ममहा दुष्कर्म है, न्यायार्थ अपने बन्धु को भी दण्ड देना धर्म है। इस तत्व पर ही कौरवों से पाण्डवों का रण हुआ, जो भव्य भारत वर्ष के कल्पान्त का कारण हुआ। जो भव्य भारतवर्ष के कल्पान्त का कारण हुआ। सब लोग हिलमिल कर चलो, पारस्परिक ईर्ष्या तजो, भारत न दुर्दिन देखता, मचता महाभारत न जो। हो स्वप्रतुल्य सदैव को सब शौर्य्य सहसा खो गया।

महा दुष्कर्म क्या है?

1. वस्तहरण करना
2. सहायता न करना
3. धन चुराना
4. अधिकार खोना

Options :

686340144045. 1
686340144046. 2
686340144047. 3
686340144048. 4

Question Number : 13 Question Id : 68634036473 Question Type : MCQ Option Shuffling : No Is Question Mandatory : No Calculator : None Response Time : N.A Think Time : N.A Minimum Instruction Time : 0

Correct Marks : 4 Wrong Marks : 1

Read the passage below and answer the questions that follow:

The wise old Wazir was famous for his judgement and people came to him for justice from all parts of the country. One day two men came to his court and claimed ownership of an extraordinarily good-looking horse. It was a black beauty indeed. One of the men was tall, very well-dressed and soft-spoken. The Wazir heard them patiently and asked them to leave the horse and come to him next morning. Both the men came the next morning. The Wazir asked his soldiers to give the horse to the tall man and to arrest the other man. The tall man wanted to know how the Wazir had learnt the truth. "Very simple", said he, "Firstly, a man of your appearance and manners could not have been the thief. Still, I wanted to be sure, just after you had left the court. I asked one my soldiers to leave the horse free and to see whom it followed. It went after you. This hint was enough for me."

With the Wazir's wisdom, the tall man was -

- A. consoled
- B. impressed
- C. embarrassed
- D. undecided
- E. confused

Choose the correct answer from the options given below:

- 1. A and B
- 2. C and D
- 3. D and E
- 4. B only

Options :

- 686340144049. 1
- 686340144050. 2
- 686340144051. 3
- 686340144052. 4

Question Number : 13 Question Id : 68634036473 Question Type : MCQ Option Shuffling : No Is Question Mandatory : No Calculator : None Response Time : N.A Think Time : N.A Minimum Instruction Time : 0

Correct Marks : 4 Wrong Marks : 1

गद्यांश पढ़कर समुचित उत्तर दीजिए-

वाचक! प्रथम सर्वत्र ही 'जय जानकी जीवन' कहा फिर पूर्वजों के शील की शिक्षा-तरंगों में बहो। दुख, शोक, जब जो आ पडे, सो पूर्वक सब सहो, होगी सफलता क्यों नहीं कर्तव्य पथ पर दृढ़ रहो। अधिकार खो कर बैठ रहना, यह ममहा दुष्कर्म है, न्यायार्थ अपने बन्धु को भी दण्ड देना धर्म है। इस तत्व पर ही कौरवों से पाण्डवों का रण हुआ, जो भव्य भारत वर्ष के कल्पान्त का कारण हुआ। जो भव्य भारतवर्ष के कल्पान्त का कारण हुआ। सब लोग हिलमिल कर चलो, पारस्परिक ईर्ष्या तजो, भारत न दुर्दिन देखता, मचता महाभारत न जो। हो स्वप्रतुल्य सदैव को सब शौर्य्य सहसा खो गया।

लोग परस्पर क्या छोड़ें?

- 1. बन्धु
- 2. सहयोगी
- 3. ईर्ष्या
- 4. रथ

Options :

- 686340144049. 1
- 686340144050. 2

686340144051. 3

686340144052. 4

Question Number : 14 Question Id : 68634036474 Question Type : MCQ Option Shuffling : No Is Question Mandatory : No Calculator : None Response Time : N.A Think Time : N.A Minimum Instruction Time : 0 Correct Marks : 4 Wrong Marks : 1

Read the passage below and answer the questions that follow:

The wise old Wazir was famous for his judgement and people came to him for justice from all parts of the country. One day two men came to his court and claimed ownership of an extraordinarily good-looking horse. It was a black beauty indeed. One of the men was tall, very well-dressed and soft-spoken. The Wazir heard them patiently and asked them to leave the horse and come to him next morning. Both the men came the next morning. The Wazir asked his soldiers to give the horse to the tall man and to arrest the other man. The tall man wanted to know how the Wazir had learnt the truth. "Very simple", said he, "Firstly, a man of your appearance and manners could not have been the thief. Still, I wanted to be sure, just after you had left the court. I asked one my soldiers to leave the horse free and to see whom it followed. It went after you. This hint was enough for me."

Choose the correct option:

The Wazir discovered the real owner of the horse

- A. by arresting the other man
- B. from the appearance and good manners of the tall man
- C. by patiently listening to the case of theft
- D. by knowing whom the horse followed
- E. by leaving the horse free

- 1. A, B, and C
- 2. D only
- 3. D and E only
- 4. A and E only

Options :

686340144053. 1

686340144054. 2

686340144055. 3

686340144056. 4

Question Number : 14 Question Id : 68634036474 Question Type : MCQ Option Shuffling : No Is Question Mandatory : No Calculator : None Response Time : N.A Think Time : N.A Minimum Instruction Time : 0 Correct Marks : 4 Wrong Marks : 1

गद्यांश पढ़कर समुचित उत्तर दीजिए-

वाचक! प्रथम सर्वत्र ही 'जय जानकी जीवन' कहा फिर पूर्वजों के शील की शिक्षा-तरंगों में बहो। दुख, शोक, जब जो आ पडे, सो पूर्वक सब सहो, होगी सफलता क्यों नहीं कर्तव्य पथ पर दृढ़ रहो। अधिकार खो कर बैठ रहना, यह ममहा दुष्कर्म है, न्यायार्थ अपने बन्धु को भी दण्ड देना धर्म है। इस तत्व पर ही कौरवों से पाण्डवों का रण हुआ, जो भव्य भारत वर्ष के कल्पान्त का कारण हुआ। जो भव्य भारतवर्ष के कल्पान्त का कारण हुआ। सब लोग हिलमिल कर चलो, पारस्परिक ईर्ष्या तजो, भारत न दुर्दिन देखता, मचता महाभारत न जो। हो स्वप्रतुल्य सदैव को सब शौर्य सहसा खो गया।

धैर्यपूर्वक क्या सहना चाहिए -

1. अपमान
2. दुःख:शोक
3. हर्ष
4. विषाद

Options :

686340144053. 1
686340144054. 2
686340144055. 3
686340144056. 4

Question Number : 15 Question Id : 68634036475 Question Type : MCQ Option Shuffling : No Is Question Mandatory : No Calculator : None Response Time : N.A Think Time : N.A Minimum Instruction Time : 0 Correct Marks : 4 Wrong Marks : 1

Read the passage below and answer the questions that follow:

The wise old Wazir was famous for his judgement and people came to him for justice from all parts of the country. One day two men came to his court and claimed ownership of an extraordinarily good-looking horse. It was a black beauty indeed. One of the men was tall, very well-dressed and soft-spoken. The Wazir heard them patiently and asked them to leave the horse and come to him next morning. Both the men came the next morning. The Wazir asked his soldiers to give the horse to the tall man and to arrest the other man. The tall man wanted to know how the Wazir had learnt the truth. "Very simple", said he, "Firstly, a man of your appearance and manners could not have been the thief. Still, I wanted to be sure, just after you had left the court. I asked one my soldiers to leave the horse free and to see whom it followed. It went after you. This hint was enough for me."

Which of the following best describes the other man?

1. Ill-dressed, short-statured, loud-voiced
2. Tall, ill-dressed, courteous
3. Not well-dressed, short but good mannered
4. Thin, poorly built, harsh in expression

Options :

686340144057. 1
686340144058. 2
686340144059. 3
686340144060. 4

Question Number : 15 Question Id : 68634036475 Question Type : MCQ Option Shuffling : No Is Question Mandatory : No Calculator : None Response Time : N.A Think Time : N.A Minimum Instruction Time : 0

Correct Marks : 4 Wrong Marks : 1

गद्यांश पढ़कर समुचित उत्तर दीजिए-

वाचक! प्रथम सर्वत्र ही 'जय जानकी जीवन' कहा फिर पूर्वजों के शील की शिक्षा-तरंगों में बहो। दुख, शोक, जब जो आ पडे, सो पूर्वक सब सहो, होगी सफलता क्यों नहीं कर्तव्य पथ पर दृढ़ रहो। अधिकार खो कर बैठ रहना, यह ममहा दुष्कर्म है, न्यायार्थ अपने बन्धु को भी दण्ड देना धर्म है। इस तत्व पर ही कौरवों से पाण्डवों का रण हुआ, जो भव्य भारत वर्ष के कल्पान्त का कारण हुआ। जो भव्य भारतवर्ष के कल्पान्त का कारण हुआ। सब लोग हिलमिल कर चलो, पारस्परिक ईर्ष्या तजो, भारत न दुर्दिन देखता, मचता महाभारत न जो। हो स्वप्रतुल्य सदैव को सब शौर्य्य सहसा खो गया।

दुर्दिन में उपसर्ग होगा-

1. दुर
2. दुद
3. दिन
4. दुर्दि

Options :

686340144057. 1
686340144058. 2
686340144059. 3
686340144060. 4

Question Number : 16 Question Id : 68634036476 Question Type : MCQ Option Shuffling : No Is Question Mandatory : No Calculator : None Response Time : N.A Think Time : N.A Minimum Instruction Time : 0

Correct Marks : 4 Wrong Marks : 1

Match List I with List II

LIST I		LIST II	
A.	Retreat	I.	Languid
B.	Vivacious	II.	Advance
C.	Evidence	III.	Confutation
D.	Exult	IV.	Lament

Choose the correct answer from the options given below:

1. A-I, B-III, C-II, D-IV
2. A-III, B-II, C-III, D-IV
3. A-II, B-I, C-III, D-IV
4. A-IV, B-II, C-I, D-III

Options :

686340144061. 1
686340144062. 2
686340144063. 3
686340144064. 4

Question Number : 16 Question Id : 68634036476 Question Type : MCQ Option Shuffling : No Is Question Mandatory : No Calculator : None Response Time : N.A Think Time : N.A Minimum Instruction Time : 0

Correct Marks : 4 Wrong Marks : 1

मध्ययुग में कृष्ण भक्ति का प्रचार ब्रज मण्डल -

- A. में बड़े उत्साह और भावना के साथ हुआ।
- B. इस ब्रज मण्डल में कई कृष्ण भक्ति
- C. संप्रदाय सक्रिय थे
- D. उनमें वल्लभ, निम्बार्क, राधा वल्लभ, हरिदासी
- E. और चैतन्य सम्प्रदाय विशेष रूप से है।

उपरोक्त वाक्यांशों का उचित क्रम लेकर, नीचे दिए गए में से सही उत्तर का चयन कीजिए:

1. D, E, C, B, A
2. A, B, C, D, E
3. E, D, B, A, C
4. C, A, D, E, B

Options :

686340144061. 1
686340144062. 2
686340144063. 3
686340144064. 4

Question Number : 17 Question Id : 68634036477 Question Type : MCQ Option Shuffling : No Is Question Mandatory : No Calculator : None Response Time : N.A Think Time : N.A Minimum Instruction Time : 0

Correct Marks : 4 Wrong Marks : 1

Match List I with List II

LIST I		LIST II	
A.	Schism	I.	Demote
B.	Quixotic	II.	Secretly
C.	Relegate	III.	Unrealistic
D.	Incognito	IV.	Split

Choose the correct answer from the options given below:

1. A-I, B-III, C-II, D-IV
2. A-IV, B-III, C-I, D-II
3. A-II, B-III, C-IV, D-I
4. A-II, B-IV, C-III, D-I

Options :

686340144065. 1
686340144066. 2
686340144067. 3
686340144068. 4

Question Number : 17 Question Id : 68634036477 Question Type : MCQ Option Shuffling : No Is Question Mandatory : No Calculator : None Response Time : N.A Think Time : N.A Minimum Instruction Time : 0

Correct Marks : 4 Wrong Marks : 1

निम्नलिखित वाक्यों में से शुद्ध वाक्यों का चयन कीजिए?

- A. पिताजी ने मुझे कुछ रुपये दिये।
- B. बच्चे ने रोया।
- C. इस गाँव में घर-घर यही दशा है।
- D. इस विषय में आपसे क्या कहूँ।
- E. प्रधानमंत्री ने भाषण दिया था।

नीचे दिए गए विकल्पों में से सही उत्तर का चयन कीजिए:

1. केवल A, B, C, E
2. केवल A, D, E
3. केवल B, C, A
4. केवल D, B, C

Options :

- 686340144065. 1
- 686340144066. 2
- 686340144067. 3
- 686340144068. 4

Question Number : 18 Question Id : 68634036478 Question Type : MCQ Option Shuffling : No Is Question Mandatory : No Calculator : None Response Time : N.A Think Time : N.A Minimum Instruction Time : 0 Correct Marks : 4 Wrong Marks : 1

Choose the option which can substitute the underlined group of words correctly, without changing the meaning of the sentence.

'Holding the fatal telegram in her closed fist, the distraught mother fell back on the couch.'

- 1. fell back
- 2. fell on
- 3. fell back for
- 4. no change

Options :

- 686340144069. 1
- 686340144070. 2
- 686340144071. 3
- 686340144072. 4

Question Number : 18 Question Id : 68634036478 Question Type : MCQ Option Shuffling : No Is Question Mandatory : No Calculator : None Response Time : N.A Think Time : N.A Minimum Instruction Time : 0 Correct Marks : 4 Wrong Marks : 1

निम्नलिखित वाक्यों में से शुद्ध वाक्य का चयन कीजिए?

- A. बहुत से भारत के वैज्ञानिक विदेश गए।
- B. आप पर राम ने मुकदमा चलाया है
- C. आपका दही बहुत खटा है
- D. उसे मृत्यु दण्ड की सजा मिली।
- E. गाय-बैल घास चर रहे हैं।

नीचे दिए गए विकल्पों में से सबसे उपयुक्त उत्तर का चयन कीजिए:

- 1. D, C, E
- 2. A, B, C
- 3. B, C, D
- 4. B, C, E

Options :

- 686340144069. 1

686340144070. 2

686340144071. 3

686340144072. 4

Question Number : 19 Question Id : 68634036479 Question Type : MCQ Option Shuffling : No Is Question Mandatory : No Calculator : None Response Time : N.A Think Time : N.A Minimum Instruction Time : 0

Correct Marks : 4 Wrong Marks : 1

Pick out the incorrect statement(s) and choose the option given below.

- A. It is very difficult to break through the layers surrounding a mystery
- B. You achieve a break through
- C. If something breaks through, it appears in a place where it was previously hidden
- D. It was a cloudy day but the sun broke through in the afternoon

Choose the correct answer from the options given below:

- 1. A, B, C only
- 2. C only
- 3. B, D only
- 4. A, B, C, D only

Options :

686340144073. 1

686340144074. 2

686340144075. 3

686340144076. 4

Question Number : 19 Question Id : 68634036479 Question Type : MCQ Option Shuffling : No Is Question Mandatory : No Calculator : None Response Time : N.A Think Time : N.A Minimum Instruction Time : 0

Correct Marks : 4 Wrong Marks : 1

निम्न वाक्यों में से वाक्य परिपकृत करें:

मैं कहाँ जाऊँ क्या करुं कुछ समझ में नहीं आ रहा है।

- A. मैं विवेकशील हूँ।
- B. मैं किंकर्तव्यमूढ़ हो गया हूँ।
- C. मैं निराश हूँ।
- D. मैं चिंतित हूँ।
- E. मैं चेतना शून्य हूँ।

नीचे दिए गए विकल्पों में से सही उत्तर का चयन कीजिए;

- 1. केवल A
- 2. केवल B
- 3. केवल C
- 4. केवल D, E

Options :

- 686340144073. 1
- 686340144074. 2
- 686340144075. 3
- 686340144076. 4

Question Number : 20 Question Id : 68634036480 Question Type : MCQ Option Shuffling : No Is Question Mandatory : No Calculator : None Response Time : N.A Think Time : N.A Minimum Instruction Time : 0 Correct Marks : 4 Wrong Marks : 1

Read the given sentence to find out whether there is any error in it. The number of that part is the answer.
(ignore the errors of punctuation, if any)

- 1. The principal was
- 2. convinced with
- 3. his innocence
- 4. in the act.

- 1. 1
- 2. 2
- 3. 3
- 4. 4

Options :

- 686340144077. 1
- 686340144078. 2

686340144079. 3

686340144080. 4

Question Number : 20 Question Id : 68634036480 Question Type : MCQ Option Shuffling : No Is Question Mandatory : No Calculator : None Response Time : N.A Think Time : N.A Minimum Instruction Time : 0 Correct Marks : 4 Wrong Marks : 1

निम्नलिखित वाक्य को ठीक करने में उचित शब्द होगा:

वाक्य - हमारी सौभाग्यवती कन्या का विवाह होने जा रहा है।

1. आयुष्यमती
2. बहू
3. बधु
4. बेटी

Options :

686340144077. 1

686340144078. 2

686340144079. 3

686340144080. 4

Question Number : 21 Question Id : 68634036481 Question Type : MCQ Option Shuffling : No Is Question Mandatory : No Calculator : None Response Time : N.A Think Time : N.A Minimum Instruction Time : 0 Correct Marks : 4 Wrong Marks : 1

Match the List I with the one word substitution in List II

LIST I		LIST II	
A.	Beneath the skin	I.	Trog lodyte
B.	Too old for work	II.	Sub cutaneous
C.	Wise and full of deep knowledge	III.	Super annuated
D.	One who lives in a cave	IV.	Sapient

Choose the correct answer from the options given below:

1. A-II, B-IV, C-III, D-I
2. A-II, B-III, C-IV, D-I
3. A-II, B-I, C-IV, D-III
4. A-II, B-III, C-I, D-IV

Options :

686340144081. 1

686340144082. 2

686340144083. 3

686340144084. 4

Question Number : 21 Question Id : 68634036481 Question Type : MCQ Option Shuffling : No Is Question Mandatory :
No Calculator : None Response Time : N.A Think Time : N.A Minimum Instruction Time : 0

Correct Marks : 4 Wrong Marks : 1

"टेलिविजन का _____ किसने किया।"

वाक्य में उचित शब्द लगाकर वाक्य को पूरा करें।

1. उत्पत्ति
2. व्यूत्पत्ति
3. अविष्कार
4. उन्नति

Options :

686340144081. 1
686340144082. 2
686340144083. 3
686340144084. 4

Question Number : 22 Question Id : 68634036482 Question Type : MCQ Option Shuffling : No Is Question Mandatory :
No Calculator : None Response Time : N.A Think Time : N.A Minimum Instruction Time : 0

Correct Marks : 4 Wrong Marks : 1

Pick out the correct statements from the sentences given below:

- A. She despired none of her lovers
- B. She did not despise any of her lovers
- C. She Sheldom or ever has sweet talks with her son
- D. She Sheldom or never has sweet talks with her son
- E. He ran fast tremendously

Choose the most appropriate answer from the options given below:

1. A, B, E only
2. E only
3. A, B, D only
4. C, E only

Options :

686340144085. 1
686340144086. 2
686340144087. 3
686340144088. 4

Question Number : 22 Question Id : 68634036482 Question Type : MCQ Option Shuffling : No Is Question Mandatory :
No Calculator : None Response Time : N.A Think Time : N.A Minimum Instruction Time : 0

Correct Marks : 4 Wrong Marks : 1

देशभक्त कठोर _____ को सहते है। वाक्य की पूर्ति सही शब्द द्वारा करें:

1. यातना
2. यातनाएँ
3. तकलीफें
4. मार

Options :

686340144085. 1
686340144086. 2
686340144087. 3
686340144088. 4

Question Number : 23 Question Id : 68634036483 Question Type : MCQ Option Shuffling : No Is Question Mandatory : No Calculator : None Response Time : N.A Think Time : N.A Minimum Instruction Time : 0

Correct Marks : 4 Wrong Marks : 1

Choose the right option of indirect speech:

He said, "The country passed through a crisis ten years ago."

1. He said that the country passed through a crisis ten years before
2. He said that the country had passed through a crisis ten years before
3. He said that country had been passing through a crisis ten years before
4. He said that the country had passed through a crisis ten years ago

Options :

686340144089. 1
686340144090. 2
686340144091. 3
686340144092. 4

Question Number : 23 Question Id : 68634036483 Question Type : MCQ Option Shuffling : No Is Question Mandatory : No Calculator : None Response Time : N.A Think Time : N.A Minimum Instruction Time : 0

Correct Marks : 4 Wrong Marks : 1

सूची I का सूची II से मिलान कीजिए

सूची I		सूची II	
A.	जिसके अंग दुरुस्त न हो	I.	अग्रगण्य
B.	जिसकी गिनती न की जा सके	II.	अग्रिम
C.	जो पहले दे दिया जाय	III.	अपांग
D.	जो सबके आगे रहता हो	IV.	अग्रणी

निम्नलिखित विकल्पों में से सही उत्तर का चयन कीजिए :

1. A-II, B-III, C-IV, D-I

2. A-III, B-I, C-II, D-IV

3. A-VI, B-I, C-III, D-II

4. A-III, B-I, C-II, D-IV

Options :

686340144089. 1

686340144090. 2

686340144091. 3

686340144092. 4

Question Number : 24 Question Id : 68634036484 Question Type : MCQ Option Shuffling : No Is Question Mandatory : No Calculator : None Response Time : N.A Think Time : N.A Minimum Instruction Time : 0

Correct Marks : 4 Wrong Marks : 1

Match List I with List II

LIST I		LIST II	
A.	Tut !	I.	Express doubts
B.	Ahem !	II.	Cry of greeting
C.	Preto !	III.	Slight disapproval
D.	Ahoy !	IV.	While performing a magic trick

Choose the correct answer from the options given below:

1. A-II, B-I, C-III, D-IV

2. A-III, B-I, C-IV, D-II

3. A-II, B-III, C-I, D-IV

4. A-I, B-II, C-IV, D-III

Options :

686340144093. 1

686340144094. 2

686340144095. 3

686340144096. 4

Question Number : 24 Question Id : 68634036484 Question Type : MCQ Option Shuffling : No Is Question Mandatory : No Calculator : None Response Time : N.A Think Time : N.A Minimum Instruction Time : 0 Correct Marks : 4 Wrong Marks : 1

"जिसकी गहराई का पता न लग सके" के लिए एक शब्द है:

1. अखाद्य
2. अटूट
3. अगाध
4. अगेय

Options :

686340144093. 1
686340144094. 2
686340144095. 3
686340144096. 4

Question Number : 25 Question Id : 68634036485 Question Type : MCQ Option Shuffling : No Is Question Mandatory : No Calculator : None Response Time : N.A Think Time : N.A Minimum Instruction Time : 0 Correct Marks : 4 Wrong Marks : 1

A number of sentences are given below which, when properly sequenced, form a coherent paragraph. Each sentence is labelled with a letter. Choose the most logical order of sentences from among the given choices to construct a coherent paragraph.

- A. It was with this invincible spirit that Netaji opposed Wavell's offer
- B. "Japan" surrender is not India's surrender," he said.
- C. The revolutionary spirit of Netaji was never dampened ever after the surrender of Japan
- D. He knew that a war of liberation demanded great spirit sacrifice, courage and patience

1. D, A, B, C
2. C, B, D, A
3. B, A, D, C
4. C, A, B, D

Options :

686340144097. 1
686340144098. 2
686340144099. 3
686340144100. 4

Question Number : 25 Question Id : 68634036485 Question Type : MCQ Option Shuffling : No Is Question Mandatory : No Calculator : None Response Time : N.A Think Time : N.A Minimum Instruction Time : 0 Correct Marks : 4 Wrong Marks : 1

पुचकारा कुत्ता सिर चढ़े का अर्थ है-

- A. पुचकारने पर कुत्ता भी प्यारा दिखाता है।
- B. ओछे लोग मुँह लगाने पर अनुचित लाभ उठाते हैं
- C. ओछे लोग ही इस जमाने में तरक्की कर सकते हैं
- D. नगण्य व्यक्ति को कभी अपमानित नहीं करना चाहिए।
- E. पुचकारने पर कुत्ता अधिक पैर चाटता है।

नीचे दिए गए विकल्पों में से सबसे उपयुक्त उत्तर का चयन कीजिए:

- 1. केवल A, B
- 2. केवल B
- 3. केवल C, D
- 4. केवल E

Options :

- 686340144097. 1
- 686340144098. 2
- 686340144099. 3
- 686340144100. 4

Question Number : 26 Question Id : 68634036486 Question Type : MCQ Option Shuffling : No Is Question Mandatory : No Calculator : None Response Time : N.A Think Time : N.A Minimum Instruction Time : 0

Correct Marks : 4 Wrong Marks : 1

A number of sentences are given below which, when properly sequenced, form a coherent paragraph. Each sentence is labelled with a letter. Choose the most logical order of sentence from among the given choices to construct a coherent paragraph.

- A. India has a near-unique record of strategic matters.
- B. But India's four wars all indecisive that is to say, they led to no political objective despite the lives lost.
- C. After world War II, it is one of the two countries that has fought four wars.
- D. The other, of course, is China.

- 1. A, C, D, B
- 2. C, A, D, B
- 3. B, D, C, A
- 4. A, B, C, D

Options :

- 686340144101. 1
- 686340144102. 2
- 686340144103. 3
- 686340144104. 4

Question Number : 26 Question Id : 68634036486 Question Type : MCQ Option Shuffling : No Is Question Mandatory : No Calculator : None Response Time : N.A Think Time : N.A Minimum Instruction Time : 0

Correct Marks : 4 Wrong Marks : 1

सूची I का सूची II से मिलान कीजिए

सूची I (लोकोक्ति)		सूची II (अर्थ)	
A.	आगे नाथ न पीछे पगहा	I.	केवल बाह्य प्रदर्शन
B.	अंधों में काना राजा	II.	किसी तरह की जिम्मेवारी का न होना
C.	ऊँची दुकान फीका पकवान	III.	अपनी बुराई नहीं दिखती
D.	चिराग तले अंधेरा	IV.	मूर्खों में कुछ पढ़ा-लिखा व्यक्ति

निम्नलिखित विकल्पों में से सही उत्तर का चयन कीजिए :

1. A-II, B-IV, C-I, D-III
2. A-IV, B-III, C-II, D-I
3. A-I, B-II, C-III, D-IV
4. A-II, B-III, C-IV, D-I

Options :

686340144101. 1
686340144102. 2
686340144103. 3
686340144104. 4

Question Number : 27 Question Id : 68634036487 Question Type : MCQ Option Shuffling : No Is Question Mandatory : No Calculator : None Response Time : N.A Think Time : N.A Minimum Instruction Time : 0

Correct Marks : 4 Wrong Marks : 1

In the following question, the first and the last part of the sentence are numbered as 1 and 6. The rest of sentences is split into four parts and named P, Q, R and S. These four parts are not given in their proper order. Read the sentences and find out which combination is correct.

1. Those that have seen the Hindus
- P. have naturally no more doubt
- Q. of the existence of other person
- R. among them in their own country
- S. of their existence than own country
6. whom they have met

1. P, S, Q, R
2. P, S, R, Q
3. R, P, S, Q
4. R, Q, P, S

Options :

686340144105. 1
686340144106. 2

686340144107. 3

686340144108. 4

Question Number : 27 Question Id : 68634036487 Question Type : MCQ Option Shuffling : No Is Question Mandatory : No Calculator : None Response Time : N.A Think Time : N.A Minimum Instruction Time : 0 Correct Marks : 4 Wrong Marks : 1

सूची I का सूची II से मिलान कीजिए

सूची I (मुहावरे एवं लोकोक्ति)		सूची II (अर्थ)	
A.	कोठी वाला रोवै छप्पर वाला सौवै	I.	सब दिन एक जैसे नहीं होते
B.	जी दुबले क्यों शहर के अन्दरों से	II.	काम सब चाहते हैं
C.	कभी के दिन बड़े कभी के रात	III.	अधिक धन चिन्ता का कारण होता है
D.	काम प्यारा है चाम प्यारा नहीं	IV.	अपनी चिन्ता न करते दूसरों की चिन्ता करना

निम्नलिखित विकल्पों में से सही उत्तर का चयन कीजिए :

1. A-I, B-II, C-III, D-IV
2. A-IV, B-III, C-II, D-I
3. A-III, B-IV, C-I, D-II
4. A-III, B-IV, C-II, D-I

Options :

686340144105. 1

686340144106. 2

686340144107. 3

686340144108. 4

Question Number : 28 Question Id : 68634036488 Question Type : MCQ Option Shuffling : No Is Question Mandatory : No Calculator : None Response Time : N.A Think Time : N.A Minimum Instruction Time : 0 Correct Marks : 4 Wrong Marks : 1

The exact meaning of the underlined phrasal verb is:

'Mahendra doesn't phone me any more.
He was cottoned on to the fact that
I am not interested in his ideas'

- A. Understand
- B. Realise
- C. Chagrined
- D. Pacified

Choose the correct answer from the options given below:

- 1. A, B only
- 2. A, C only
- 3. C, D only
- 4. A, C, D only

Options :

- 686340144109. 1
- 686340144110. 2
- 686340144111. 3
- 686340144112. 4

**Question Number : 28 Question Id : 68634036488 Question Type : MCQ Option Shuffling : No Is Question Mandatory :
No Calculator : None Response Time : N.A Think Time : N.A Minimum Instruction Time : 0
Correct Marks : 4 Wrong Marks : 1**

वह इतनी प्रख्यात हो चुकी है, मैं प्रख्यात का समानार्थी होगा?

- 1. विख्यात
- 2. कुख्यात
- 3. प्रसिद्ध
- 4. प्रचलित

Options :

- 686340144109. 1
- 686340144110. 2
- 686340144111. 3
- 686340144112. 4

**Question Number : 29 Question Id : 68634036489 Question Type : MCQ Option Shuffling : No Is Question Mandatory :
No Calculator : None Response Time : N.A Think Time : N.A Minimum Instruction Time : 0
Correct Marks : 4 Wrong Marks : 1**

In the given sentence, a group of words has been underlined. Pick out the one which can substitute the underlined group of words correctly, without changing the meaning of the sentence.

All of the candidates except Manindra and I intends on choosing cricket as hobby.

1. Me intends on choosing
2. Me intends on choose
3. Me intend to choose
4. I intend on choose

Options :

686340144113. 1
686340144114. 2
686340144115. 3
686340144116. 4

Question Number : 29 Question Id : 68634036489 Question Type : MCQ Option Shuffling : No Is Question Mandatory : No Calculator : None Response Time : N.A Think Time : N.A Minimum Instruction Time : 0 Correct Marks : 4 Wrong Marks : 1

सूची I का सूची II से मिलान कीजिए

सूची I (शब्द)	सूची II (पर्यायवाची)
A. उत्कर्ष	I. हरित
B. उदास	II. अभ्युदय
C. पंकज	III. खिन्न
D. कपोत	IV. शतदल

निम्नलिखित विकल्पों में से सही उत्तर का चयन कीजिए :

1. A-II, B-I, C-III, D-IV
2. A-I, B-IV, C-II, D-III
3. A-IV, B-II, C-III, D-I
4. A-II, B-III, C-IV, D-I

Options :

686340144113. 1
686340144114. 2
686340144115. 3
686340144116. 4

Question Number : 30 Question Id : 68634036490 Question Type : MCQ Option Shuffling : No Is Question Mandatory : No Calculator : None Response Time : N.A Think Time : N.A Minimum Instruction Time : 0 Correct Marks : 4 Wrong Marks : 1

Match the statements in List I with their one word substitution in List II

LIST I		LIST II	
A.	The central part of a wheel	I.	Incorporeal
B.	Without a body	II.	Hub
C.	A great work of art	III.	Perjury
D.	A lie told on purpose	IV.	Magnum opus

Choose the correct answer from the options given below:

1. A-II, B-I, C-IV, D-III
2. A-I, B-II, C-III, D-IV
3. A-III, B-IV, C-I, D-II
4. A-IV, B-III, C-II, D-I

Options :

686340144117. 1
686340144118. 2
686340144119. 3
686340144120. 4

Question Number : 30 Question Id : 68634036490 Question Type : MCQ Option Shuffling : No Is Question Mandatory : No Calculator : None Response Time : N.A Think Time : N.A Minimum Instruction Time : 0

Correct Marks : 4 Wrong Marks : 1

ये गंभीर अनुभव सब यह विचार-वैभव सब।

रेखांकित शब्द का विलोम शब्द है?

1. सुख-सम्पदा
2. धन-दौलत
3. गरीबी
4. लक्ष्मी

Options :

686340144117. 1
686340144118. 2
686340144119. 3
686340144120. 4

Question Number : 31 Question Id : 68634036491 Question Type : MCQ Option Shuffling : No Is Question Mandatory : No Calculator : None Response Time : N.A Think Time : N.A Minimum Instruction Time : 0

Correct Marks : 4 Wrong Marks : 1

The ratio of investments of two partners P and Q is 9:10 and the ratio of their profits is 4:5. If P invested the money for 8 months, then for how much time Q invested his money.

1. 8 months
2. 9 months
3. 10 months
4. 11 months

Options :

686340144121. 1
686340144122. 2
686340144123. 3
686340144124. 4

Question Number : 31 Question Id : 68634036491 Question Type : MCQ Option Shuffling : No Is Question Mandatory : No Calculator : None Response Time : N.A Think Time : N.A Minimum Instruction Time : 0

Correct Marks : 4 Wrong Marks : 1

P और Q नामक दो साझेदारों के निवेश का अनुपात 9:10 है और उनके लाभ का अनुपात क्रमशः 4:5 है। यदि P ने 8 माह के लिए निवेश किया है तो Q ने कितने समय के लिए निवेश किया था?

1. 8 माह
2. 9 माह
3. 10 माह
4. 11 माह

Options :

686340144121. 1
686340144122. 2
686340144123. 3
686340144124. 4

Question Number : 32 Question Id : 68634036492 Question Type : MCQ Option Shuffling : No Is Question Mandatory : No Calculator : None Response Time : N.A Think Time : N.A Minimum Instruction Time : 0

Correct Marks : 4 Wrong Marks : 1

If the compound interest on a certain sum at 10% per annum for 3 years is ₹ 33,100, find the simple interest on the same sum at the same rate and for the same period ?

1. ₹ 25,000
2. ₹ 28,000
3. ₹ 30,000
4. ₹ 32,000

Options :

686340144125. 1
686340144126. 2
686340144127. 3
686340144128. 4

Question Number : 32 Question Id : 68634036492 Question Type : MCQ Option Shuffling : No Is Question Mandatory : No Calculator : None Response Time : N.A Think Time : N.A Minimum Instruction Time : 0 Correct Marks : 4 Wrong Marks : 1

एक निश्चित धनराशि पर 10 प्रतिशत वार्षिक दर से 3 वर्ष के लिए चक्रवृद्धि ब्याज ₹ 33,100 है तो उपर्युक्त धनराशि पर, उसी दर और उसी अवधि के लिए साधारण ब्याज ज्ञात कीजिए?

1. ₹ 25,000
2. ₹ 28,000
3. ₹ 30,000
4. ₹ 32,000

Options :

686340144125. 1
686340144126. 2
686340144127. 3
686340144128. 4

Question Number : 33 Question Id : 68634036493 Question Type : MCQ Option Shuffling : No Is Question Mandatory : No Calculator : None Response Time : N.A Think Time : N.A Minimum Instruction Time : 0 Correct Marks : 4 Wrong Marks : 1

A sum of money becomes ₹ 13,380 after 3 years and ₹ 20,070 after 6 years on compound Interest. Find the sum?

1. ₹ 8,120
2. ₹ 8,420
3. ₹ 8,520
4. ₹ 8,920

Options :

- 686340144129. 1
- 686340144130. 2
- 686340144131. 3
- 686340144132. 4

Question Number : 33 Question Id : 68634036493 Question Type : MCQ Option Shuffling : No Is Question Mandatory : No Calculator : None Response Time : N.A Think Time : N.A Minimum Instruction Time : 0 Correct Marks : 4 Wrong Marks : 1

यदि चक्रवृद्धि ब्याज पर एक धनराशि 3 वर्ष के बाद ₹13,380 और 6 वर्ष के ₹20,070 हो जाती है। तो उपर्युक्त धनराशि को ज्ञात कीजिए?

- 1. ₹ 8,120
- 2. ₹ 8,420
- 3. ₹ 8,520
- 4. ₹ 8,920

Options :

- 686340144129. 1
- 686340144130. 2
- 686340144131. 3
- 686340144132. 4

Question Number : 34 Question Id : 68634036494 Question Type : MCQ Option Shuffling : No Is Question Mandatory : No Calculator : None Response Time : N.A Think Time : N.A Minimum Instruction Time : 0 Correct Marks : 4 Wrong Marks : 1

A vendor bought Apples at 8 for ₹ 12 and sold them at 6 for ₹ 10. Find his gain or loss percent?

- 1. 10% gain
- 2. 10% loss
- 3. 11.11% gain
- 4. 11.11% loss

Options :

- 686340144133. 1
- 686340144134. 2
- 686340144135. 3
- 686340144136. 4

Question Number : 34 Question Id : 68634036494 Question Type : MCQ Option Shuffling : No Is Question Mandatory : No Calculator : None Response Time : N.A Think Time : N.A Minimum Instruction Time : 0 Correct Marks : 4 Wrong Marks : 1

एक विक्रेता ने ₹12 में 8 सेब खरीदे और उनमें से 6 को ₹ 10 में बेच दिया। तो उसके लाभ या हानि-प्रतिशत को ज्ञात कीजिए?

1. 10 प्रतिशत लाभ
2. 10 प्रतिशत हानि
3. 11.11 प्रतिशत लाभ
4. 11.11 प्रतिशत हानि

Options :

686340144133. 1
686340144134. 2
686340144135. 3
686340144136. 4

Question Number : 35 Question Id : 68634036495 Question Type : MCQ Option Shuffling : No Is Question Mandatory : No Calculator : None Response Time : N.A Think Time : N.A Minimum Instruction Time : 0

Correct Marks : 4 Wrong Marks : 1

After getting two successive discounts, a trouser with a list price of ₹ 300 is available at ₹ 210. If the second discount is 12.5% find the first discount?

1. 10%
2. 15%
3. 20%
4. 25%

Options :

686340144137. 1
686340144138. 2
686340144139. 3
686340144140. 4

Question Number : 35 Question Id : 68634036495 Question Type : MCQ Option Shuffling : No Is Question Mandatory : No Calculator : None Response Time : N.A Think Time : N.A Minimum Instruction Time : 0

Correct Marks : 4 Wrong Marks : 1

लगातार दो बार छूट जाने के बाद ₹ 300 की मूल्य सूची वाली एक पतलून ₹ 210 में उपलब्ध है। यदि दूसरी बार छूट 12.5 प्रतिशत थी तो पहली बार वाली छूट को ज्ञात कीजिए?

1. 10 प्रतिशत
2. 15 प्रतिशत
3. 20 प्रतिशत
4. 25 प्रतिशत

Options :

686340144137. 1
686340144138. 2
686340144139. 3
686340144140. 4

Question Number : 36 Question Id : 68634036496 Question Type : MCQ Option Shuffling : No Is Question Mandatory : No Calculator : None Response Time : N.A Think Time : N.A Minimum Instruction Time : 0

Correct Marks : 4 Wrong Marks : 1

P scored 30% marks and failed by 30 marks, Q scored 40% marks and obtained 40 marks more than those required to pass. The pass percentage is:

1. 32%
2. 34.2%
3. 36%
4. 38%

Options :

686340144141. 1
686340144142. 2
686340144143. 3
686340144144. 4

Question Number : 36 Question Id : 68634036496 Question Type : MCQ Option Shuffling : No Is Question Mandatory : No Calculator : None Response Time : N.A Think Time : N.A Minimum Instruction Time : 0

Correct Marks : 4 Wrong Marks : 1

यदि P ने 30 प्रतिशत अंक प्राप्त किए और वह 30 अंकों में फेल हो गया। जबकि Q ने 40 प्रतिशत अंक प्राप्त किए और उसने पास होने की तुलना में 40 अंक अधिक प्राप्त किए। तो उत्तीर्ण होने का प्रतिशत क्या है?

1. 32 प्रतिशत
2. 34.2 प्रतिशत
3. 36 प्रतिशत
4. 38 प्रतिशत

Options :

- 686340144141. 1
- 686340144142. 2
- 686340144143. 3
- 686340144144. 4

Question Number : 37 Question Id : 68634036497 Question Type : MCQ Option Shuffling : No Is Question Mandatory : No Calculator : None Response Time : N.A Think Time : N.A Minimum Instruction Time : 0

Correct Marks : 4 Wrong Marks : 1

Aman spends 50% of his income. If income increases by 20% and expenses increases by 10%, his saving will increase by:

1. 25%
2. 30%
3. 35%
4. 40%

Options :

- 686340144145. 1
- 686340144146. 2
- 686340144147. 3
- 686340144148. 4

Question Number : 37 Question Id : 68634036497 Question Type : MCQ Option Shuffling : No Is Question Mandatory : No Calculator : None Response Time : N.A Think Time : N.A Minimum Instruction Time : 0

Correct Marks : 4 Wrong Marks : 1

अमन अपनी आय का 50 प्रतिशत व्यय करता है। यदि उसकी आय में 20 प्रतिशत वृद्धि और उसके व्यय में 10 प्रतिशत वृद्धि होती है तो उसकी बचत में कितनी वृद्धि होगी?

1. 25 प्रतिशत
2. 30 प्रतिशत
3. 35 प्रतिशत
4. 40 प्रतिशत

Options :

- 686340144145. 1
- 686340144146. 2
- 686340144147. 3
- 686340144148. 4

Question Number : 38 Question Id : 68634036498 Question Type : MCQ Option Shuffling : No Is Question Mandatory : No Calculator : None Response Time : N.A Think Time : N.A Minimum Instruction Time : 0

Correct Marks : 4 Wrong Marks : 1

A pump can fill a tank with water in 2 hours. Because of a leak, it took 2 hours and 20 minutes to fill the tank. The leak can drain all the water of the tank in:

1. 14 hours
2. 12 hours
3. 10 hours
4. 8 hours

Options :

- 686340144149. 1
- 686340144150. 2
- 686340144151. 3
- 686340144152. 4

Question Number : 38 Question Id : 68634036498 Question Type : MCQ Option Shuffling : No Is Question Mandatory : No Calculator : None Response Time : N.A Think Time : N.A Minimum Instruction Time : 0

Correct Marks : 4 Wrong Marks : 1

एक पम्प 2 घंटे में जल से एक टंकी भर सकता है। उसमें एक रिसाव के कारण टंकी भरने में 2 घंटे 20 मिनट लग गए। इस रिसाव से टंकी के सम्पूर्ण जल को बाहर निकलने में कितना समय लग सकता है?

1. 14 घंटे
2. 12 घंटे
3. 10 घंटे
4. 8 घंटे

Options :

686340144149. 1
686340144150. 2
686340144151. 3
686340144152. 4

Question Number : 39 Question Id : 68634036499 Question Type : MCQ Option Shuffling : No Is Question Mandatory : No Calculator : None Response Time : N.A Think Time : N.A Minimum Instruction Time : 0

Correct Marks : 4 Wrong Marks : 1

By walking at $\frac{3}{4}$ of her usual speed, a lady reaches her office 30 minutes later than her usual time. Find the usual time taken by her to reach her office?

1. 60 min
2. 80 min
3. 90 min
4. 100 min

Options :

686340144153. 1
686340144154. 2
686340144155. 3
686340144156. 4

Question Number : 39 Question Id : 68634036499 Question Type : MCQ Option Shuffling : No Is Question Mandatory : No Calculator : None Response Time : N.A Think Time : N.A Minimum Instruction Time : 0

Correct Marks : 4 Wrong Marks : 1

एक महिला अपनी सामान्य गति की $\frac{3}{4}$ गति से पैदल चल कर अपने सामान्य समय की तुलना में 30 मिनट देर से अपने कार्यालय पहुंचती है। तो उसके द्वारा अपने कार्यालय पहुँचने के लिए जाने वाले सामान्य समय को ज्ञात कीजिए?

1. 60 मिनट
2. 80 मिनट
3. 90 मिनट
4. 100 मिनट

Options :

686340144153. 1
686340144154. 2
686340144155. 3
686340144156. 4

Question Number : 40 Question Id : 68634036500 Question Type : MCQ Option Shuffling : No Is Question Mandatory : No Calculator : None Response Time : N.A Think Time : N.A Minimum Instruction Time : 0

Correct Marks : 4 Wrong Marks : 1

The average speed of a car is one-third of the speed of a bus. The bus covers 1125 km 15 hours. How much distance will the car cover in 30 minutes?

1. 12 km
2. 12.5 km
3. 15 km
4. 17 km

Options :

686340144157. 1
686340144158. 2
686340144159. 3
686340144160. 4

Question Number : 40 Question Id : 68634036500 Question Type : MCQ Option Shuffling : No Is Question Mandatory : No Calculator : None Response Time : N.A Think Time : N.A Minimum Instruction Time : 0

Correct Marks : 4 Wrong Marks : 1

कार की औसत गति एक बस की गति की एक-तिहाई है। यह बस 15 घंटे में 1125 किमी की दूरी पार करती है। तो उपर्युक्त कार 30 मिनट में कितनी दूरी पार करेगी?

1. 12 किमी
2. 12.5 किमी
3. 15 किमी
4. 17 किमी

Options :

686340144157. 1
686340144158. 2
686340144159. 3
686340144160. 4

Question Number : 41 Question Id : 68634036501 Question Type : MCQ Option Shuffling : No Is Question Mandatory : No Calculator : None Response Time : N.A Think Time : N.A Minimum Instruction Time : 0 Correct Marks : 4 Wrong Marks : 1

A 200 m long train is running with a speed of 50 km/h. In what time will it pass a man who is running at 5 km/h in the direction opposite to that in which the train is going ?

1. $\frac{140}{11}$ sec
2. $\frac{142}{11}$ sec
3. $\frac{144}{11}$ sec
4. 15 sec

Options :

686340144161. 1
686340144162. 2
686340144163. 3
686340144164. 4

Question Number : 41 Question Id : 68634036501 Question Type : MCQ Option Shuffling : No Is Question Mandatory : No Calculator : None Response Time : N.A Think Time : N.A Minimum Instruction Time : 0 Correct Marks : 4 Wrong Marks : 1

200 मीटर लंबी एक ट्रेन 50 किमी/घंटा की गति से जा रही है। वह कितने समय में उस व्यक्ति के पास से गुजरेगी, जो 5 किमी/घंटा की गति से उस दिशा के विपरीत दौड़ रहा है, जिस दिशा में ट्रेन जा रही है?

1. $\frac{140}{11}$ सेकंड
2. $\frac{142}{11}$ सेकंड
3. $\frac{144}{11}$ सेकंड
4. 15 सेकंड

Options :

686340144161. 1
686340144162. 2
686340144163. 3
686340144164. 4

Question Number : 42 Question Id : 68634036502 Question Type : MCQ Option Shuffling : No Is Question Mandatory : No Calculator : None Response Time : N.A Think Time : N.A Minimum Instruction Time : 0

Correct Marks : 4 Wrong Marks : 1

P can do a piece of work in 10 days; B in 15 days. They work for 5 days. The rest of the work finished by R in 2 days. If they get ₹ 1,500 for the whole work, the daily wages of B and R are:

1. ₹ 125
2. ₹ 150
3. ₹ 200
4. ₹ 225

Options :

686340144165. 1
686340144166. 2
686340144167. 3
686340144168. 4

Question Number : 42 Question Id : 68634036502 Question Type : MCQ Option Shuffling : No Is Question Mandatory : No Calculator : None Response Time : N.A Think Time : N.A Minimum Instruction Time : 0

Correct Marks : 4 Wrong Marks : 1

P कार्य के एक भाग को 10 दिन में कर सकता है, जबकि B को 15 दिन लगते हैं। इन दोनों ने 5 दिन तक कार्य किया। R ने शेष कार्य 2 दिन में पूरा किया। यदि उन्हें पूरे कार्य के लिए ₹ 1,500 मिलते हैं तो B और R दैनिक मजदूरी कितनी होगी?

1. ₹ 125
2. ₹ 150
3. ₹ 200
4. ₹ 225

Options :

686340144165. 1
686340144166. 2
686340144167. 3
686340144168. 4

Question Number : 43 Question Id : 68634036503 Question Type : MCQ Option Shuffling : No Is Question Mandatory : No Calculator : None Response Time : N.A Think Time : N.A Minimum Instruction Time : 0

Correct Marks : 4 Wrong Marks : 1

P and Q working separately can do a piece of work in 9 and 12 days respectively. If they work for a day alternately, P beginning, in how many days, the work will be completed ?

1. 8
2. 10
3. $10\frac{1}{4}$
4. 12

Options :

686340144169. 1
686340144170. 2
686340144171. 3
686340144172. 4

Question Number : 43 Question Id : 68634036503 Question Type : MCQ Option Shuffling : No Is Question Mandatory : No Calculator : None Response Time : N.A Think Time : N.A Minimum Instruction Time : 0

Correct Marks : 4 Wrong Marks : 1

पृथक रूप से कार्य करने वाले P और Q कार्य के एक भाग को क्रमशः 9 और 12 दिन में पूरा कर सकते हैं। यदि वे विकल्पतः एक दिन के लिए कार्य करते हैं, जिसमें P कार्य प्रारम्भ करता है तो कितने दिनों में यह कार्य पूरा होगा?

1. 8

2. 10

3. $10\frac{1}{4}$

4. 12

Options :

686340144169. 1

686340144170. 2

686340144171. 3

686340144172. 4

Question Number : 44 Question Id : 68634036504 Question Type : MCQ Option Shuffling : No Is Question Mandatory : No Calculator : None Response Time : N.A Think Time : N.A Minimum Instruction Time : 0

Correct Marks : 4 Wrong Marks : 1

A and B can do a piece of work in 10 days. B and C together can do it in 15 days. If A is twice as good a workman as C. Find what time B alone can do it?

1. 20 days

2. 25 days

3. 30 days

4. 35 days

Options :

686340144173. 1

686340144174. 2

686340144175. 3

686340144176. 4

Question Number : 44 Question Id : 68634036504 Question Type : MCQ Option Shuffling : No Is Question Mandatory : No Calculator : None Response Time : N.A Think Time : N.A Minimum Instruction Time : 0

Correct Marks : 4 Wrong Marks : 1

A और B कार्य के एक भाग को 10 दिन में कर सकते हैं। B और C एक साथ मिल कर उसे 15 दिन में कर सकते हैं। यदि A एक श्रमिक के रूप में C की तुलना में दो गुना अच्छा है तो अकेला B कितने समय में उसे पूरा कर सकता है?

1. 20 दिन
2. 25 दिन
3. 30 दिन
4. 35 दिन

Options :

686340144173. 1
686340144174. 2
686340144175. 3
686340144176. 4

Question Number : 45 Question Id : 68634036505 Question Type : MCQ Option Shuffling : No Is Question Mandatory : No Calculator : None Response Time : N.A Think Time : N.A Minimum Instruction Time : 0 Correct Marks : 4 Wrong Marks : 1

The average of ten numbers is 8. If each numbers is multiplied by 15, then average of the set of numbers is:

1. 8
2. 120
3. 100
4. 110

Options :

686340144177. 1
686340144178. 2
686340144179. 3
686340144180. 4

Question Number : 45 Question Id : 68634036505 Question Type : MCQ Option Shuffling : No Is Question Mandatory : No Calculator : None Response Time : N.A Think Time : N.A Minimum Instruction Time : 0 Correct Marks : 4 Wrong Marks : 1

10 संख्याओं का औसत 8 है। यदि प्रत्येक संख्या को 15 से गुणा किया जाता है तो संख्याओं के नए समुच्चय का औसत क्या होगा?

1. 8
2. 120
3. 100
4. 110

Options :

- 686340144177. 1
- 686340144178. 2
- 686340144179. 3
- 686340144180. 4

Question Number : 46 Question Id : 68634036506 Question Type : MCQ Option Shuffling : No Is Question Mandatory : No Calculator : None Response Time : N.A Think Time : N.A Minimum Instruction Time : 0 Correct Marks : 4 Wrong Marks : 1

The average weight of 10 men is increased by 1.5 kg when one of them, who weighs 70 kg is replaced by a new man. The weight of the new man is:

- 1. 85 kg
- 2. 90 kg
- 3. 80 kg
- 4. 87 kg

Options :

- 686340144181. 1
- 686340144182. 2
- 686340144183. 3
- 686340144184. 4

Question Number : 46 Question Id : 68634036506 Question Type : MCQ Option Shuffling : No Is Question Mandatory : No Calculator : None Response Time : N.A Think Time : N.A Minimum Instruction Time : 0 Correct Marks : 4 Wrong Marks : 1

10 व्यक्तियों के औसत भार में तब 1.5 किग्रा की वृद्धि हो जाती है, तब उनमें से 70 किग्रा भार वाले एक व्यक्ति को नए व्यक्ति से प्रतिस्थापित किया जाता है। तो नए व्यक्ति का भार क्या है?

- 1. 85 किग्रा
- 2. 90 किग्रा
- 3. 80 किग्रा
- 4. 87 किग्रा

Options :

- 686340144181. 1
- 686340144182. 2
- 686340144183. 3
- 686340144184. 4

Question Number : 47 Question Id : 68634036507 Question Type : MCQ Option Shuffling : No Is Question Mandatory : No Calculator : None Response Time : N.A Think Time : N.A Minimum Instruction Time : 0 Correct Marks : 4 Wrong Marks : 1

A, B, C and D are four consecutive even numbers respectively and their average is 61. What is the product of A and D ?

1. 3612
2. 3512
3. 3712
4. 3812

Options :

686340144185. 1
686340144186. 2
686340144187. 3
686340144188. 4

Question Number : 47 Question Id : 68634036507 Question Type : MCQ Option Shuffling : No Is Question Mandatory : No Calculator : None Response Time : N.A Think Time : N.A Minimum Instruction Time : 0

Correct Marks : 4 Wrong Marks : 1

A, B, C और D क्रमशः चार निरंतर सम संख्याएँ हैं और औसत 61 है। तो A और D गुणनफल क्या है?

1. 3612
2. 3512
3. 3712
4. 3812

Options :

686340144185. 1
686340144186. 2
686340144187. 3
686340144188. 4

Question Number : 48 Question Id : 68634036508 Question Type : MCQ Option Shuffling : No Is Question Mandatory : No Calculator : None Response Time : N.A Think Time : N.A Minimum Instruction Time : 0

Correct Marks : 4 Wrong Marks : 1

In what ratio must water be mixed with milk to gain $16\frac{2}{3}\%$ on selling the mixture at cost price?

1. 2:3
2. 1:3
3. 1:5
4. 1:6

Options :

686340144189. 1
686340144190. 2
686340144191. 3
686340144192. 4

**Question Number : 48 Question Id : 68634036508 Question Type : MCQ Option Shuffling : No Is Question Mandatory :
No Calculator : None Response Time : N.A Think Time : N.A Minimum Instruction Time : 0
Correct Marks : 4 Wrong Marks : 1**

दूध के लागत मूल्य पर $16\frac{2}{3}\%$ लाभ कमाने के लिए दूध में किस अनुपात में पानी मिलाया जाना चाहिए?

1. 2:3
2. 1:3
3. 1:5
4. 1:6

Options :

686340144189. 1
686340144190. 2
686340144191. 3
686340144192. 4

**Question Number : 49 Question Id : 68634036509 Question Type : MCQ Option Shuffling : No Is Question Mandatory :
No Calculator : None Response Time : N.A Think Time : N.A Minimum Instruction Time : 0
Correct Marks : 4 Wrong Marks : 1**

Four unbiased coins are tossed. What is the probability of getting almost three heads ?

1. $\frac{1}{16}$
2. $\frac{15}{16}$
3. $\frac{3}{16}$
4. $\frac{8}{16}$

Options :

686340144193. 1
686340144194. 2
686340144195. 3
686340144196. 4

**Question Number : 49 Question Id : 68634036509 Question Type : MCQ Option Shuffling : No Is Question Mandatory :
No Calculator : None Response Time : N.A Think Time : N.A Minimum Instruction Time : 0
Correct Marks : 4 Wrong Marks : 1**

चार पक्षपातरहित सिक्के उछाले जाते हैं। लगभग तीन चित्त पाने की क्या प्रायिकता है?

1. $\frac{1}{16}$

2. $\frac{15}{16}$

3. $\frac{3}{16}$

4. $\frac{8}{16}$

Options :

686340144193. 1

686340144194. 2

686340144195. 3

686340144196. 4

Question Number : 50 Question Id : 68634036510 Question Type : MCQ Option Shuffling : No Is Question Mandatory : No Calculator : None Response Time : N.A Think Time : N.A Minimum Instruction Time : 0

Correct Marks : 4 Wrong Marks : 1

In how many ways can the letters of the word 'DETAIL' be arranged so that the vowels occupy only the odd positions ?

1. 24

2. 28

3. 32

4. 36

Options :

686340144197. 1

686340144198. 2

686340144199. 3

686340144200. 4

Question Number : 50 Question Id : 68634036510 Question Type : MCQ Option Shuffling : No Is Question Mandatory : No Calculator : None Response Time : N.A Think Time : N.A Minimum Instruction Time : 0

Correct Marks : 4 Wrong Marks : 1

'DETAIL' शब्द के वर्ण को कितने तरीकों में व्यवस्थित किया जा सकता है ताकि स्वर केवल विषम स्थिति रहें?

1. 24

2. 28

3. 32

4. 36

Options :

686340144197. 1

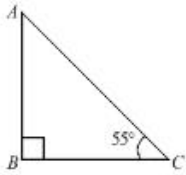
686340144198. 2

686340144199. 3

686340144200. 4

Question Number : 51 Question Id : 68634036511 Question Type : MCQ Option Shuffling : No Is Question Mandatory : No Calculator : None Response Time : N.A Think Time : N.A Minimum Instruction Time : 0 Correct Marks : 4 Wrong Marks : 1

Which of the following statements is true based on the following diagram?



1. $BC < AB$

2. $BC > AB$

3. $AC < AB$

4. $AC < BC$

Options :

686340144201. 1

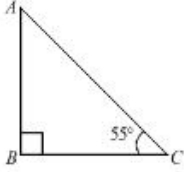
686340144202. 2

686340144203. 3

686340144204. 4

Question Number : 51 Question Id : 68634036511 Question Type : MCQ Option Shuffling : No Is Question Mandatory : No Calculator : None Response Time : N.A Think Time : N.A Minimum Instruction Time : 0 Correct Marks : 4 Wrong Marks : 1

निम्नलिखित आरेख के आधार पर नीचे दिए गए विकल्पों में से कौन-सा सही है?



1. $BC < AB$

2. $BC > AB$

3. $AC < AB$

4. $AC < BC$

Options :

686340144201. 1

686340144202. 2

686340144203. 3

686340144204. 4

Question Number : 52 Question Id : 68634036512 Question Type : MCQ Option Shuffling : No Is Question Mandatory : No Calculator : None Response Time : N.A Think Time : N.A Minimum Instruction Time : 0

Correct Marks : 4 Wrong Marks : 1

The heights of two right circular cones are in the ratio 1:2 and the perimeters of their bases are in the ratio 3:4. Find the ratio of their volumes?

1. 8:35

2. 7:32

3. 9:32

4. 1:32

Options :

686340144205. 1

686340144206. 2

686340144207. 3

686340144208. 4

Question Number : 52 Question Id : 68634036512 Question Type : MCQ Option Shuffling : No Is Question Mandatory : No Calculator : None Response Time : N.A Think Time : N.A Minimum Instruction Time : 0

Correct Marks : 4 Wrong Marks : 1

दो लंब वृत्तीय शंकु की ऊँचाइयों का अनुपात 1: 2 है और उनके आधारों का परिमाण 3:4 अनुपात में है। तो उनके आयतनों का अनुपात ज्ञात कीजिए?

1. 8:35
2. 7:32
3. 9:32
4. 1:32

Options :

686340144205. 1
686340144206. 2
686340144207. 3
686340144208. 4

Question Number : 53 Question Id : 68634036513 Question Type : MCQ Option Shuffling : No Is Question Mandatory : No Calculator : None Response Time : N.A Think Time : N.A Minimum Instruction Time : 0

Correct Marks : 4 Wrong Marks : 1

If the surface areas of two spheres are in the ratio of 4:25, then the ratio of their volumes is:

1. 1:120
2. 8:123
3. 8:127
4. 8:125

Options :

686340144209. 1
686340144210. 2
686340144211. 3
686340144212. 4

Question Number : 53 Question Id : 68634036513 Question Type : MCQ Option Shuffling : No Is Question Mandatory : No Calculator : None Response Time : N.A Think Time : N.A Minimum Instruction Time : 0

Correct Marks : 4 Wrong Marks : 1

दो गोलों का पृष्ठीय क्षेत्रफल 4:25 के अनुपात में है तो उनके आयतनों का अनुपात क्या है?

1. 1:120
2. 8:123
3. 8:127
4. 8:125

Options :

686340144209. 1

686340144210. 2

686340144211. 3

686340144212. 4

Question Number : 54 Question Id : 68634036514 Question Type : MCQ Option Shuffling : No Is Question Mandatory : No Calculator : None Response Time : N.A Think Time : N.A Minimum Instruction Time : 0

Correct Marks : 4 Wrong Marks : 1

If $a^2 + b^2 + \frac{1}{a^2} + \frac{1}{b^2} = 4$ then the value of $a^2 + b^2$

1. 3

2. 2

3. 5

4. 6

Options :

686340144213. 1

686340144214. 2

686340144215. 3

686340144216. 4

Question Number : 54 Question Id : 68634036514 Question Type : MCQ Option Shuffling : No Is Question Mandatory : No Calculator : None Response Time : N.A Think Time : N.A Minimum Instruction Time : 0

Correct Marks : 4 Wrong Marks : 1

यदि $a^2 + b^2 + \frac{1}{a^2} + \frac{1}{b^2} = 4$ है तो $a^2 + b^2$ का मान क्या होगा?

1. 3

2. 2

3. 5

4. 6

Options :

686340144213. 1

686340144214. 2

686340144215. 3

686340144216. 4

Question Number : 55 Question Id : 68634036515 Question Type : MCQ Option Shuffling : No Is Question Mandatory : No Calculator : None Response Time : N.A Think Time : N.A Minimum Instruction Time : 0

Correct Marks : 4 Wrong Marks : 1

$a + b + c = 6$, $a^2 + b^2 + c^2 = 14$ and $a^3 + b^3 + 3 = 36$, then the value of abc is:

1. 6
2. 8
3. 16
4. 18

Options :

686340144217. 1
686340144218. 2
686340144219. 3
686340144220. 4

Question Number : 55 Question Id : 68634036515 Question Type : MCQ Option Shuffling : No Is Question Mandatory : No Calculator : None Response Time : N.A Think Time : N.A Minimum Instruction Time : 0 Correct Marks : 4 Wrong Marks : 1

यदि $a + b + c = 6$, $a^2 + b^2 + c^2 = 14$ और $a^3 + b^3 + 3 = 36$ है तो abc का मान क्या है?

1. 6
2. 8
3. 16
4. 18

Options :

686340144217. 1
686340144218. 2
686340144219. 3
686340144220. 4

Question Number : 56 Question Id : 68634036516 Question Type : MCQ Option Shuffling : No Is Question Mandatory : No Calculator : None Response Time : N.A Think Time : N.A Minimum Instruction Time : 0 Correct Marks : 4 Wrong Marks : 1

Below question contains two equations as I and II. You have to solve both equations and determine the relationship between them and choose correct option:

I. $2x^2 + 3x - 35 = 0$

II. $4y^2 + 10y - 104 = 0$

1. If $x > y$
2. If $x \leq y$
3. If $x \geq y$
4. If $x = y$ or relationship between x and y cannot be established

Options :

686340144221. 1

686340144222. 2

686340144223. 3

686340144224. 4

Question Number : 56 Question Id : 68634036516 Question Type : MCQ Option Shuffling : No Is Question Mandatory : No Calculator : None Response Time : N.A Think Time : N.A Minimum Instruction Time : 0

Correct Marks : 4 Wrong Marks : 1

नीचे दिए गए प्रश्न में दो समीकरण I और II के रूप में हैं। आपको दोनों समीकरणों को हल करना है और उनके बीच संबंध को निर्धारित कीजिए। सही विकल्प चयन कीजिए:

I. $2x^2 + 3x - 35 = 0$

II. $4y^2 + 10y - 104 = 0$

1. यदि $x > y$
2. यदि $x \leq y$
3. यदि $x \geq y$
4. यदि $x = y$ अथवा x और y के बीच संबंध स्थापित नहीं किया जा सकता

Options :

686340144221. 1

686340144222. 2

686340144223. 3

686340144224. 4

Question Number : 57 Question Id : 68634036517 Question Type : MCQ Option Shuffling : No Is Question Mandatory : No Calculator : None Response Time : N.A Think Time : N.A Minimum Instruction Time : 0

Correct Marks : 4 Wrong Marks : 1

A square is inscribed in a circle of diameter $2a$ and another square is circumscribing circle. The difference between the areas of outer and inner squares is:

1. a^2

2. $2a^2$

3. $3a^2$

4. $4a^2$

Options :

686340144225. 1

686340144226. 2

686340144227. 3

686340144228. 4

Question Number : 57 Question Id : 68634036517 Question Type : MCQ Option Shuffling : No Is Question Mandatory : No Calculator : None Response Time : N.A Think Time : N.A Minimum Instruction Time : 0

Correct Marks : 4 Wrong Marks : 1

एक वर्ग को $2a$ व्यास वाले एक वृत्त में अंतर्वृत्तित किया गया है और अन्य वर्ग को परिगत वर्ग में अंतर्वृत्तित किया जाता है। तो बाह्य और आंतरिक वर्गों में क्या अन्तर है?

1. a^2

2. $2a^2$

3. $3a^2$

4. $4a^2$

Options :

686340144225. 1

686340144226. 2

686340144227. 3

686340144228. 4

Question Number : 58 Question Id : 68634036518 Question Type : MCQ Option Shuffling : No Is Question Mandatory : No Calculator : None Response Time : N.A Think Time : N.A Minimum Instruction Time : 0

Correct Marks : 4 Wrong Marks : 1

If PQ and RS are two diameters of a circle of radius r and they are mutually perpendicular, then what is the ratio of the area of the circle to the area of the ΔPRS ?

1. $\pi : 2$
2. $\pi : 1$
3. $\pi : 4$
4. $2\pi : 1$

Options :

686340144229. 1
686340144230. 2
686340144231. 3
686340144232. 4

Question Number : 58 Question Id : 68634036518 Question Type : MCQ Option Shuffling : No Is Question Mandatory : No Calculator : None Response Time : N.A Think Time : N.A Minimum Instruction Time : 0

Correct Marks : 4 Wrong Marks : 1

यदि PQ और RS त्रिज्या r के एक वृत्त के दो व्यास हैं और वे परस्पर लंबवत हों तो वृत्त के क्षेत्रफल का ΔPRS के क्षेत्रफल के साथ अनुपात क्या है?

1. $\pi : 2$
2. $\pi : 1$
3. $\pi : 4$
4. $2\pi : 1$

Options :

686340144229. 1
686340144230. 2
686340144231. 3
686340144232. 4

Question Number : 59 Question Id : 68634036519 Question Type : MCQ Option Shuffling : No Is Question Mandatory : No Calculator : None Response Time : N.A Think Time : N.A Minimum Instruction Time : 0

Correct Marks : 4 Wrong Marks : 1

Find the value of $\frac{1}{4 \times 5} + \frac{1}{5 \times 6} + \frac{1}{6 \times 7} + \dots + \frac{1}{10 \times 11}$:

1. $\frac{7}{43}$

2. $\frac{7}{40}$

3. $\frac{7}{44}$

4. $\frac{3}{40}$

Options :

686340144233. 1

686340144234. 2

686340144235. 3

686340144236. 4

Question Number : 59 Question Id : 68634036519 Question Type : MCQ Option Shuffling : No Is Question Mandatory : No Calculator : None Response Time : N.A Think Time : N.A Minimum Instruction Time : 0

Correct Marks : 4 Wrong Marks : 1

$\frac{1}{4 \times 5} + \frac{1}{5 \times 6} + \frac{1}{6 \times 7} + \dots + \frac{1}{10 \times 11}$ काम मान ज्ञात कीजिए:

1. $\frac{7}{43}$

2. $\frac{7}{40}$

3. $\frac{7}{44}$

4. $\frac{3}{40}$

Options :

686340144233. 1

686340144234. 2

686340144235. 3

686340144236. 4

Question Number : 60 Question Id : 68634036520 Question Type : MCQ Option Shuffling : No Is Question Mandatory : No Calculator : None Response Time : N.A Think Time : N.A Minimum Instruction Time : 0

Correct Marks : 4 Wrong Marks : 1

If x is an integer such that $x + \frac{1}{x} = \frac{17}{4}$, then the value of $x - \frac{1}{x}$:

1. $\frac{13}{4}$

2. $\frac{15}{4}$

3. $\frac{17}{4}$

4. $\frac{19}{4}$

Options :

686340144237. 1

686340144238. 2

686340144239. 3

686340144240. 4

Question Number : 60 Question Id : 68634036520 Question Type : MCQ Option Shuffling : No Is Question Mandatory : No Calculator : None Response Time : N.A Think Time : N.A Minimum Instruction Time : 0

Correct Marks : 4 Wrong Marks : 1

यदि x इस प्रकार का पूर्णांक है कि $x + \frac{1}{x} = \frac{17}{4}$ तो $x - \frac{1}{x}$ का मान क्या है?

1. $\frac{13}{4}$

2. $\frac{15}{4}$

3. $\frac{17}{4}$

4. $\frac{19}{4}$

Options :

686340144237. 1

686340144238. 2

686340144239. 3

686340144240. 4

Question Number : 61 Question Id : 68634036521 Question Type : MCQ Option Shuffling : No Is Question Mandatory : No Calculator : None Response Time : N.A Think Time : N.A Minimum Instruction Time : 0

Correct Marks : 4 Wrong Marks : 1

A bag contains one-rupee, 50-paise and 25-paise coins in the ratio 5:6:8. If the total amount of money in the bag is ₹ 250, find the numbers of 50 p coins in a bag?

1. 120
2. 130
3. 140
4. 150

Options :

686340144241. 1
686340144242. 2
686340144243. 3
686340144244. 4

Question Number : 61 Question Id : 68634036521 Question Type : MCQ Option Shuffling : No Is Question Mandatory : No Calculator : None Response Time : N.A Think Time : N.A Minimum Instruction Time : 0

Correct Marks : 4 Wrong Marks : 1

एक थैले में 5:6:8 के अनुपात में क्रमशः एक रुपए, 50 पैसे और 25 पैसे के सिक्के हैं। यदि इस थैले में कुल धनराशि ₹ 250 है तो उसमें 50 पैसे के सिक्कों की संख्या ज्ञात कीजिए?

1. 120
2. 130
3. 140
4. 150

Options :

686340144241. 1
686340144242. 2
686340144243. 3
686340144244. 4

Question Number : 62 Question Id : 68634036522 Question Type : MCQ Option Shuffling : No Is Question Mandatory : No Calculator : None Response Time : N.A Think Time : N.A Minimum Instruction Time : 0

Correct Marks : 4 Wrong Marks : 1

A sum of money is divided among P, Q, R and S in the ratio of 3:4:9:10 respectively. If the share of R is ₹ 2,580 more than the share of Q, then what is the total amount of Q and S together?

1. ₹ 7,220
2. ₹ 7,222
3. ₹ 7,224
4. ₹ 7,324

Options :

- 686340144245. 1
- 686340144246. 2
- 686340144247. 3
- 686340144248. 4

Question Number : 62 Question Id : 68634036522 Question Type : MCQ Option Shuffling : No Is Question Mandatory : No Calculator : None Response Time : N.A Think Time : N.A Minimum Instruction Time : 0 Correct Marks : 4 Wrong Marks : 1

एक धनराशि 3:4:9:10 के अनुपात में क्रमशः P, Q, R और S में बांटी जाती है। यदि Q के हिस्से की तुलना में R का हिस्सा ₹ 2,580 अधिक है तो Q और S दोनों की एक साथ मिला कर कुल राशि कितनी है?

- 1. ₹ 7,220
- 2. ₹ 7,222
- 3. ₹ 7,224
- 4. ₹ 7,324

Options :

- 686340144245. 1
- 686340144246. 2
- 686340144247. 3
- 686340144248. 4

Question Number : 63 Question Id : 68634036523 Question Type : MCQ Option Shuffling : No Is Question Mandatory : No Calculator : None Response Time : N.A Think Time : N.A Minimum Instruction Time : 0 Correct Marks : 4 Wrong Marks : 1

A bag contains 6 blue, 4 red, 3 yellow and 2 green marbles. If 4 marbles are picked up at random, what is the probability that atleast one of them is red?

- 1. $\frac{67}{91}$
- 2. $\frac{68}{91}$
- 3. $\frac{69}{91}$
- 4. $\frac{71}{91}$

Options :

- 686340144249. 1
- 686340144250. 2
- 686340144251. 3
- 686340144252. 4

Question Number : 63 Question Id : 68634036523 Question Type : MCQ Option Shuffling : No Is Question Mandatory : No Calculator : None Response Time : N.A Think Time : N.A Minimum Instruction Time : 0

Correct Marks : 4 Wrong Marks : 1

एक थैले में 6 नीले, 4 लाल, 3 पीले और 2 हरे कंचे हैं। यदि यादृच्छिक रूप से 4 कंचों को चुना जाता है तो इनमें कम से कम लाल रंग के कंचे होने की प्रायिकता क्या है?

1. $\frac{67}{91}$

2. $\frac{68}{91}$

3. $\frac{69}{91}$

4. $\frac{71}{91}$

Options :

686340144249. 1

686340144250. 2

686340144251. 3

686340144252. 4

Question Number : 64 Question Id : 68634036524 Question Type : MCQ Option Shuffling : No Is Question Mandatory : No Calculator : None Response Time : N.A Think Time : N.A Minimum Instruction Time : 0

Correct Marks : 4 Wrong Marks : 1

A merchant has 500 kg of sugar, some part of which he sells at 8% profit and rest at 18% profit. He gains 14% on the whole. The quantity sold at 18% profit is:

1. 200 kg

2. 300 kg

3. 400 kg

4. 500 kg

Options :

686340144253. 1

686340144254. 2

686340144255. 3

686340144256. 4

Question Number : 64 Question Id : 68634036524 Question Type : MCQ Option Shuffling : No Is Question Mandatory : No Calculator : None Response Time : N.A Think Time : N.A Minimum Instruction Time : 0

Correct Marks : 4 Wrong Marks : 1

एक व्यापारी के पास 500 किग्रा शक्कर है, जिसका कुछ भाग वह 8 प्रतिशत के लाभ पर विक्रय करता है और शेष भाग का 18 प्रतिशत के लाभ पर विक्रय करता है। सम्पूर्ण पर वह 14% लाभ प्राप्त करता है। तो 18 प्रतिशत के लाभ पर विक्रय की जाने की मात्रा क्या है?

1. 200 किग्रा
2. 300 किग्रा
3. 400 किग्रा
4. 500 किग्रा

Options :

686340144253. 1
686340144254. 2
686340144255. 3
686340144256. 4

Question Number : 65 Question Id : 68634036525 Question Type : MCQ Option Shuffling : No Is Question Mandatory : No Calculator : None Response Time : N.A Think Time : N.A Minimum Instruction Time : 0

Correct Marks : 4 Wrong Marks : 1

In how many ways, a committee of 5 members be selected from 7 men and 5 ladies, consisting of 3 men and 2 ladies?

1. 310
2. 320
3. 340
4. 350

Options :

686340144257. 1
686340144258. 2
686340144259. 3
686340144260. 4

Question Number : 65 Question Id : 68634036525 Question Type : MCQ Option Shuffling : No Is Question Mandatory : No Calculator : None Response Time : N.A Think Time : N.A Minimum Instruction Time : 0

Correct Marks : 4 Wrong Marks : 1

7 पुरुषों और 5 महिलाओं से 5 सदस्यों की उस एक समिति का चयन कितने तरीकों से किया जा सकता है, जिसमें 3 पुरुष और 2 महिलाएँ हों।

1. 310
2. 320
3. 340
4. 350

Options :

686340144257. 1
686340144258. 2
686340144259. 3
686340144260. 4

Question Number : 66 Question Id : 68634036526 Question Type : MCQ Option Shuffling : No Is Question Mandatory : No Calculator : None Response Time : N.A Think Time : N.A Minimum Instruction Time : 0

Correct Marks : 4 Wrong Marks : 1

Choose the odd group in the following :

1. 2, 3, 5, 7
2. 17, 19, 23, 29
3. 53, 59, 61, 67
4. 37, 41, 43, 49

Options :

686340144261. 1
686340144262. 2
686340144263. 3
686340144264. 4

Question Number : 66 Question Id : 68634036526 Question Type : MCQ Option Shuffling : No Is Question Mandatory : No Calculator : None Response Time : N.A Think Time : N.A Minimum Instruction Time : 0

Correct Marks : 4 Wrong Marks : 1

निम्नलिखित में से विषम समूह का चयन कीजिए:

1. 2, 3, 5, 7
2. 17, 19, 23, 29
3. 53, 59, 61, 67
4. 37, 41, 43, 49

Options :

686340144261. 1

686340144262. 2

686340144263. 3

686340144264. 4

Question Number : 67 Question Id : 68634036527 Question Type : MCQ Option Shuffling : No Is Question Mandatory : No Calculator : None Response Time : N.A Think Time : N.A Minimum Instruction Time : 0

Correct Marks : 4 Wrong Marks : 1

Choose the number which is different from others in the group :

13, 17, 23, 63, 71

1. 13

2. 23

3. 63

4. 71

Options :

686340144265. 1

686340144266. 2

686340144267. 3

686340144268. 4

Question Number : 67 Question Id : 68634036527 Question Type : MCQ Option Shuffling : No Is Question Mandatory : No Calculator : None Response Time : N.A Think Time : N.A Minimum Instruction Time : 0

Correct Marks : 4 Wrong Marks : 1

उस संख्या का चयन कीजिए जो निम्नलिखित समूह में अन्य से भिन्न है?

13, 17, 23, 63, 71

1. 13

2. 23

3. 63

4. 71

Options :

686340144265. 1

686340144266. 2

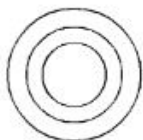
686340144267. 3

686340144268. 4

Question Number : 68 Question Id : 68634036528 Question Type : MCQ Option Shuffling : No Is Question Mandatory : No Calculator : None Response Time : N.A Think Time : N.A Minimum Instruction Time : 0

Correct Marks : 4 Wrong Marks : 1

Which of the following best represented by the figure below.



- A. Furniture, Table, Chair
- B. Polygon, Rectangle, Square
- C. Year, Week, Day
- D. Bouquet, Flowers, Petals
- E. Vehicle, Bus, Car

Choose the most appropriate answer from the options given below:

1. A, B, C only
2. B, C, D only
3. C, D, E only
4. A, C, E only

Options :

- 686340144269. 1
- 686340144270. 2
- 686340144271. 3
- 686340144272. 4

Question Number : 68 Question Id : 68634036528 Question Type : MCQ Option Shuffling : No Is Question Mandatory : No Calculator : None Response Time : N.A Think Time : N.A Minimum Instruction Time : 0 Correct Marks : 4 Wrong Marks : 1

नीचे दी गई आकृति निम्नलिखित में से किसका सर्वोत्तम ढंग से प्रतिनिधित्व करती हैं?



- A. फर्नीचर, टेबल, कुर्सी
- B. बहुभुज, आयत, वर्ग
- C. वर्ष, सप्ताह, दिन
- D. गुलदस्ता, फूल, पंखुडियाँ
- E. वाहन, बस, कार

नीचे दिए गए विकल्पों में से सबसे उपयुक्त उत्तर का चयन कीजिए:

1. केवल A, B, C
2. केवल B, C, D
3. केवल C, D, E
4. केवल A, C, E

Options :

- 686340144269. 1
- 686340144270. 2
- 686340144271. 3
- 686340144272. 4

Question Number : 69 Question Id : 68634036529 Question Type : MCQ Option Shuffling : No Is Question Mandatory : No Calculator : None Response Time : N.A Think Time : N.A Minimum Instruction Time : 0 Correct Marks : 4 Wrong Marks : 1

A walls 15 m in front and 15 m to the right then every time turning to his left, he walks 10, 20 and 30 m respectively. How far is he now from his starting point?

1. 5 m
2. $5\sqrt{2}$ m
3. 10 m
4. $10\sqrt{2}$ m

Options :

- 686340144273. 1
- 686340144274. 2
- 686340144275. 3
- 686340144276. 4

Question Number : 69 Question Id : 68634036529 Question Type : MCQ Option Shuffling : No Is Question Mandatory :

No Calculator : None Response Time : N.A Think Time : N.A Minimum Instruction Time : 0

Correct Marks : 4 Wrong Marks : 1

A अपने सामने की ओर 15 मीटर और दाईं ओर 15 मिनट तक पैदल चलता है। इसके बाद, वह प्रत्येक बार अपनी बाईं ओर मुड़ते हुए क्रमशः 10, 20 और 30 मीटर पैदल चलता है। तो वह अब अपने प्रारम्भिक बिंदु से कितना दूर है?

1. 5 मीटर
2. $5\sqrt{2}$ मीटर
3. 10 मीटर
4. $10\sqrt{2}$ मीटर

Options :

686340144273. 1

686340144274. 2

686340144275. 3

686340144276. 4

Question Number : 70 Question Id : 68634036530 Question Type : MCQ Option Shuffling : No Is Question Mandatory : No Calculator : None Response Time : N.A Think Time : N.A Minimum Instruction Time : 0

Correct Marks : 4 Wrong Marks : 1

P, Q, R, S, T, U, V, W are sitting around a round table in the same order, at equal distances. Their positions are clockwise. If V sits in the north, then what will be the position of S?

1. East
2. South-east
3. South
4. South-west

Options :

686340144277. 1

686340144278. 2

686340144279. 3

686340144280. 4

Question Number : 70 Question Id : 68634036530 Question Type : MCQ Option Shuffling : No Is Question Mandatory : No Calculator : None Response Time : N.A Think Time : N.A Minimum Instruction Time : 0

Correct Marks : 4 Wrong Marks : 1

P, Q, R, S, T, U, V, W एक गोल टेबल के चारों ओर समान दूरी पर समान क्रम में बैठे हुए हैं। उनकी स्थितियाँ दक्षिणावर्त हैं। यदि V उत्तर में बैठा हुआ है तो S की स्थिति क्या होगी?

1. पूर्व
2. दक्षिण-पूर्व
3. दक्षिण
4. दक्षिण-पश्चिम

Options :

686340144277. 1
686340144278. 2
686340144279. 3
686340144280. 4

Question Number : 71 Question Id : 68634036531 Question Type : MCQ Option Shuffling : No Is Question Mandatory : No Calculator : None Response Time : N.A Think Time : N.A Minimum Instruction Time : 0 Correct Marks : 4 Wrong Marks : 1

Who is the grand mother of D?

Given:

- A. A is the mother of B
- B. C is the son of A
- C. D is the brother of E
- D. E is the daughter of B

Choose the correct answer from the options given below:

1. A
2. B
3. C
4. E

Options :

686340144281. 1
686340144282. 2
686340144283. 3
686340144284. 4

Question Number : 71 Question Id : 68634036531 Question Type : MCQ Option Shuffling : No Is Question Mandatory : No Calculator : None Response Time : N.A Think Time : N.A Minimum Instruction Time : 0 Correct Marks : 4 Wrong Marks : 1

D की ग्रांड मदर कौन है?

मान लिया जाए कि:

- A. A, B की माता है।
- B. C, A का पुत्र है।
- C. D, E का भाई है
- D. E, B की पुत्री है।

निम्नलिखित में से सबसे उपयुक्त उत्तर का चयन कीजिए।

1. A
2. B
3. C
4. E

Options :

- 686340144281. 1
- 686340144282. 2
- 686340144283. 3
- 686340144284. 4

Question Number : 72 Question Id : 68634036532 Question Type : MCQ Option Shuffling : No Is Question Mandatory : No Calculator : None Response Time : N.A Think Time : N.A Minimum Instruction Time : 0

Correct Marks : 4 Wrong Marks : 1

If in certain code:

'bir le nac' means 'green and tasty'

'pic nac hor' means 'tomato is green'

'coc bir hor' means 'food is tasty'

Which of the following means 'tomato is testy' in that code?

1. bir le hor
2. pic hor nac
3. hor bir pic
4. nac le coc

Options :

- 686340144285. 1
- 686340144286. 2
- 686340144287. 3
- 686340144288. 4

Question Number : 72 Question Id : 68634036532 Question Type : MCQ Option Shuffling : No Is Question Mandatory : No Calculator : None Response Time : N.A Think Time : N.A Minimum Instruction Time : 0

Correct Marks : 4 Wrong Marks : 1

यदि -एक निश्चित कूट में:

'bir le nac' का अर्थ है- 'green and tasty'

'pic nac hor' का अर्थ है - 'tomato is green'

'coc bir hor' का अर्थ है - 'food is tasty'

उपरोक्त कूट में निम्नलिखित में से किसका अर्थ 'tomato is tasty' है?

1. bir le hor
2. pic hor nac
3. hor bir pic
4. nac le coc

Options :

686340144285. 1
686340144286. 2
686340144287. 3
686340144288. 4

Question Number : 73 Question Id : 68634036533 Question Type : MCQ Option Shuffling : No Is Question Mandatory : No Calculator : None Response Time : N.A Think Time : N.A Minimum Instruction Time : 0

Correct Marks : 4 Wrong Marks : 1

Choose a number to replace question mark which can establish the relationship between the number on either side of::

Given 9:80::100: ?

1. 901
2. 1009
3. 9889
4. 9999

Options :

686340144289. 1
686340144290. 2
686340144291. 3
686340144292. 4

Question Number : 73 Question Id : 68634036533 Question Type : MCQ Option Shuffling : No Is Question Mandatory : No Calculator : None Response Time : N.A Think Time : N.A Minimum Instruction Time : 0

Correct Marks : 4 Wrong Marks : 1

प्रश्न चिन्ह को प्रतिस्थापित करने के लिए उस एक संख्या का चयन कीजिए जो : : के दोनों ओर की संख्याओं के बीच समान संबंध स्थापित कर सकती है:

दिया गया है- 9:80::100:?

1. 901
2. 1009
3. 9889
4. 9999

Options :

686340144289. 1
686340144290. 2
686340144291. 3
686340144292. 4

Question Number : 74 Question Id : 68634036534 Question Type : MCQ Option Shuffling : No Is Question Mandatory : No Calculator : None Response Time : N.A Think Time : N.A Minimum Instruction Time : 0 Correct Marks : 4 Wrong Marks : 1

Given set: (21, 51, 15)

Select the pair from following in which the numbers are similarly related as in the given set.

1. (21, 30, 51)
2. (21, 35, 41)
3. (21, 51, 42)
4. (21, 91, 35)

Options :

686340144293. 1
686340144294. 2
686340144295. 3
686340144296. 4

Question Number : 74 Question Id : 68634036534 Question Type : MCQ Option Shuffling : No Is Question Mandatory : No Calculator : None Response Time : N.A Think Time : N.A Minimum Instruction Time : 0 Correct Marks : 4 Wrong Marks : 1

दिया गया समुच्चय : (21,51,15)

निम्नलिखित में से उस युग्म का चयन कीजिए, जिसमें संख्याएं समान रूप से संबंधित हैं, जैसा कि समुच्चय में दिया है।

1. (21, 30, 51)
2. (21, 35, 41)
3. (21, 51, 42)
4. (21, 91, 35)

Options :

686340144293. 1
686340144294. 2
686340144295. 3
686340144296. 4

Question Number : 75 Question Id : 68634036535 Question Type : MCQ Option Shuffling : No Is Question Mandatory : No Calculator : None Response Time : N.A Think Time : N.A Minimum Instruction Time : 0 Correct Marks : 4 Wrong Marks : 1

Choose pair of words that will fill blanks so that the sentence becomes true and sensible _____ is to Cork as Box is to _____ .

1. Wine-Hat
2. Bottle-Lid
3. Wood-Fight
4. Spout-Crate

Options :

686340144297. 1
686340144298. 2
686340144299. 3
686340144300. 4

Question Number : 75 Question Id : 68634036535 Question Type : MCQ Option Shuffling : No Is Question Mandatory : No Calculator : None Response Time : N.A Think Time : N.A Minimum Instruction Time : 0 Correct Marks : 4 Wrong Marks : 1

शब्दों के उस युग्म का चयन कीजिए, जो किस स्थानों को भरेगा ताकि वाक्य सही और तर्कसंगत बने।

_____ के साथ ढक्कन वैसा ही है, जैसा कि डिब्बे के साथ _____।

1. वाइन - हैट
2. बोतल - ढक्कन
3. काष्ठ - लडाई
4. टोंटी -टोकरी

Options :

686340144297. 1
686340144298. 2
686340144299. 3
686340144300. 4

Question Number : 76 Question Id : 68634036536 Question Type : MCQ Option Shuffling : No Is Question Mandatory : No Calculator : None Response Time : N.A Think Time : N.A Minimum Instruction Time : 0 Correct Marks : 4 Wrong Marks : 1

Choose a word for I from (A), (B), (C), (D) as well as a word for II from (P), (Q), (R), (S) to establish the similar relationship between the words on either side of :: in "I : Gum :: Worm : II"

- I. (A) Bottle (B) Brand (C) Loaf (D) Tree
II. (P) Silk (Q) Insect (R) Cocoon (S) Thread

Choose the correct combination from the following:

1. AQ
2. BR
3. CS
4. DP

Options :

686340144301. 1
686340144302. 2
686340144303. 3
686340144304. 4

Question Number : 76 Question Id : 68634036536 Question Type : MCQ Option Shuffling : No Is Question Mandatory : No Calculator : None Response Time : N.A Think Time : N.A Minimum Instruction Time : 0 Correct Marks : 4 Wrong Marks : 1

"I : गोंद :: कीड़ा : II" में

:: के दोनों ओर के शब्दों के मध्य संबंध स्थापित करने के लिए

I के लिए (A), (B), (C), (D) में से एक शब्द और II के लिए (P), (Q), (R), (S) में से एक शब्द का चयन कीजिए:

- I. (A) बोतल (B) ब्रांड (C) पाव रोटी (D) वृक्ष
II. (P) रेशम (Q) कीड़ा (R) कृशिकोष (S) धागा

निम्नलिखित में से सही संयोजन का चयन कीजिए:

1. AQ
2. BR
3. CS
4. DP

Options :

686340144301. 1
686340144302. 2
686340144303. 3
686340144304. 4

Question Number : 77 Question Id : 68634036537 Question Type : MCQ Option Shuffling : No Is Question Mandatory : No Calculator : None Response Time : N.A Think Time : N.A Minimum Instruction Time : 0 Correct Marks : 4 Wrong Marks : 1

Statement: Should the consumption of aerated drinks be banned in India?

Arguments: I) Yes, this is the only way to reduce the risk of exposing people to some diseases
II) No, there is no confirmed evidence that such products have adverse effects on human body

Which of the above argument(s) hold strong for the statement ?

1. Only argument I
2. Only argument II
3. Argument I and argument II
4. Neither argument I and argument II

Options :

686340144305. 1
686340144306. 2
686340144307. 3
686340144308. 4

Question Number : 77 Question Id : 68634036537 Question Type : MCQ Option Shuffling : No Is Question Mandatory : No Calculator : None Response Time : N.A Think Time : N.A Minimum Instruction Time : 0 Correct Marks : 4 Wrong Marks : 1

कथन : क्या भारत में वातित पेयों के उपभोग पर प्रतिबंध लगाया जाना चाहिए?

तर्क I : हां, यह लोगों के कुछ बीमारियों के प्रति उद्दासित होने के जोखिम में कमी लाने का एकमात्र तरीका है।

तर्क II : नहीं, इस बारे में कोई संपुष्ट साक्ष्य नहीं है कि इस प्रकार के उत्पादों से मानव शरीर पर प्रतिकूल प्रभाव पड़ते हैं।

उपयुक्त कथन का निम्नलिखित में से कौन-सा/कौन-से तर्क पुरजोर समर्थन करते हैं?

1. केवल तर्क - I
2. केवल तर्क - II
3. तर्क -I और तर्क - II
4. न तो तर्क - I, न ही तर्क - II

Options :

686340144305. 1
686340144306. 2
686340144307. 3
686340144308. 4

Question Number : 78 Question Id : 68634036538 Question Type : MCQ Option Shuffling : No Is Question Mandatory : No Calculator : None Response Time : N.A Think Time : N.A Minimum Instruction Time : 0 Correct Marks : 4 Wrong Marks : 1

In a certain code, DESK is written as # \$ 52, RIDE is written as % 7 # \$. How is RISK written in that code?

1. %752
2. %725
3. %7\$#
4. %7#2

Options :

686340144309. 1
686340144310. 2
686340144311. 3
686340144312. 4

Question Number : 78 Question Id : 68634036538 Question Type : MCQ Option Shuffling : No Is Question Mandatory : No Calculator : None Response Time : N.A Think Time : N.A Minimum Instruction Time : 0 Correct Marks : 4 Wrong Marks : 1

एक निश्चित कूट में DESK को #52 के रूप में लिखा है और RIDE को % 7# के रूप में लिखा है। तो इस कूट में RISK को कैसे लिखा जाता है?

1. %752
2. %725
3. %7\$#
4. %7#2

Options :

686340144309. 1
686340144310. 2
686340144311. 3
686340144312. 4

Question Number : 79 Question Id : 68634036539 Question Type : MCQ Option Shuffling : No Is Question Mandatory : No Calculator : None Response Time : N.A Think Time : N.A Minimum Instruction Time : 0

Correct Marks : 4 Wrong Marks : 1

If in a certain code, O is written as E, A as C, M as I, S as O, N as P, E as M, I as A, P as N and C as S, then how will COMPANIES be written in that code?

1. SMINCPAMO
2. SEIACPAMO
3. SEINCPAMO
4. SIMNCPMAO

Options :

686340144313. 1
686340144314. 2
686340144315. 3
686340144316. 4

Question Number : 79 Question Id : 68634036539 Question Type : MCQ Option Shuffling : No Is Question Mandatory : No Calculator : None Response Time : N.A Think Time : N.A Minimum Instruction Time : 0

Correct Marks : 4 Wrong Marks : 1

यदि किसी निश्चित कूट में O को E के रूप में, A को C के रूप में, M को I के रूप में, S को O के रूप में, N को P के रूप में, E को M के रूप में, I को A के रूप में, P को N के रूप में और C को S के रूप में लिखा जाता है तो उपर्युक्त कूट में COMPANIES को कैसे लिखा जाएगा?

1. SMINCPAMO
2. SEIACPAMO
3. SEINCPAMO
4. SIMNCPMAO

Options :

686340144313. 1
686340144314. 2
686340144315. 3
686340144316. 4

Question Number : 80 Question Id : 68634036540 Question Type : MCQ Option Shuffling : No Is Question Mandatory : No Calculator : None Response Time : N.A Think Time : N.A Minimum Instruction Time : 0 Correct Marks : 4 Wrong Marks : 1

Statement: A tells B that, "In my absence, I request you to look after the affairs of our company."

Assumptions: I) B may not accept the request of A.

II) B has expertise to handle the affairs of the company.

Which of the above assumption(s) is/are implicit in the statement?

1. Only assumption I
2. Only assumption II
3. Assumption I and assumption II
4. Neither assumption I nor assumption II

Options :

686340144317. 1
686340144318. 2
686340144319. 3
686340144320. 4

Question Number : 80 Question Id : 68634036540 Question Type : MCQ Option Shuffling : No Is Question Mandatory : No Calculator : None Response Time : N.A Think Time : N.A Minimum Instruction Time : 0 Correct Marks : 4 Wrong Marks : 1

कथन: A, B से कहता है, "मेरी अनुपस्थिति में मेरा आपसे अनुरोध है कि आप हमारी कंपनी के मामलों की देखभाल करें।

पूर्व-धारणा - I: B, A का अनुरोध स्वीकार नहीं कर सकता है।

II: B की इस कंपनी के मामलों को संभालने में विशेषता है।

निम्नलिखित में से कौन-सी पूर्व धारणा/पूर्व धारणाएं उपर्युक्त कथन में अंतर्निहित है।

1. केवल पूर्व धारणा - I
2. केवल पूर्व धारणा - II
3. पूर्व धारणा - I और पूर्व धारणा - II
4. न तो पूर्व - धारणा - I, न ही पूर्व धारणा - II

Options :

686340144317. 1

686340144318. 2

686340144319. 3

686340144320. 4

Question Number : 81 Question Id : 68634036541 Question Type : MCQ Option Shuffling : No Is Question Mandatory : No Calculator : None Response Time : N.A Think Time : N.A Minimum Instruction Time : 0

Correct Marks : 4 Wrong Marks : 1

Which of the following month pair starts on some day in a year?

1. June October
2. April, November
3. April, July
4. October, December

Options :

686340144321. 1

686340144322. 2

686340144323. 3

686340144324. 4

Question Number : 81 Question Id : 68634036541 Question Type : MCQ Option Shuffling : No Is Question Mandatory : No Calculator : None Response Time : N.A Think Time : N.A Minimum Instruction Time : 0

Correct Marks : 4 Wrong Marks : 1

निम्नलिखित में से कौन-सा माह युग्म एक वर्ष में समान दिवस पर आरम्भ होता है?

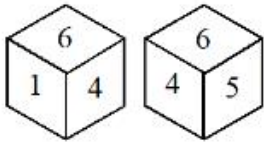
1. जून, अक्टूबर
2. अप्रैल, नवम्बर
3. अप्रैल, जुलाई
4. अक्टूबर, दिसंबर

Options :

686340144321. 1
686340144322. 2
686340144323. 3
686340144324. 4

Question Number : 82 Question Id : 68634036542 Question Type : MCQ Option Shuffling : No Is Question Mandatory : No Calculator : None Response Time : N.A Think Time : N.A Minimum Instruction Time : 0 Correct Marks : 4 Wrong Marks : 1

Two positions of a dice are shown below. What number will be at the bottom, when number 1 is on the top?



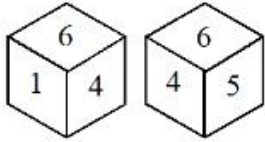
1. 2
2. 3
3. 4
4. 5

Options :

686340144325. 1
686340144326. 2
686340144327. 3
686340144328. 4

Question Number : 82 Question Id : 68634036542 Question Type : MCQ Option Shuffling : No Is Question Mandatory : No Calculator : None Response Time : N.A Think Time : N.A Minimum Instruction Time : 0 Correct Marks : 4 Wrong Marks : 1

एक पासा की दो स्थितियां नीचे दर्शाई गई हैं। जब संख्या 1 शीर्ष पर होती है तो कौन-सी संख्या तल पर होगी?



1. 2
2. 3
3. 4
4. 5

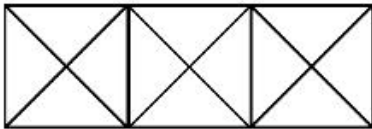
Options :

686340144325. 1
686340144326. 2
686340144327. 3
686340144328. 4

Question Number : 83 Question Id : 68634036543 Question Type : MCQ Option Shuffling : No Is Question Mandatory : No Calculator : None Response Time : N.A Think Time : N.A Minimum Instruction Time : 0

Correct Marks : 4 Wrong Marks : 1

How many triangles and square are there in the given figure?



1. 28 triangles, 3 squares
2. 24 triangles, 5 squares
3. 28 triangles, 5 squares
4. 24 triangles, 3 squares

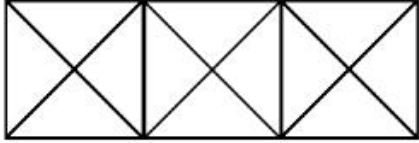
Options :

686340144329. 1
686340144330. 2
686340144331. 3
686340144332. 4

Question Number : 83 Question Id : 68634036543 Question Type : MCQ Option Shuffling : No Is Question Mandatory : No Calculator : None Response Time : N.A Think Time : N.A Minimum Instruction Time : 0

Correct Marks : 4 Wrong Marks : 1

नीचे दी गई आकृति में कितने त्रिकोण और वर्ग हैं?



1. 28 त्रिकोण, 3 वर्ग
2. 24 त्रिकोण, 5 वर्ग
3. 28 त्रिकोण, 5 वर्ग
4. 24 त्रिकोण, 3 वर्ग

Options :

686340144329. 1
686340144330. 2
686340144331. 3
686340144332. 4

Question Number : 84 Question Id : 68634036544 Question Type : MCQ Option Shuffling : No Is Question Mandatory : No Calculator : None Response Time : N.A Think Time : N.A Minimum Instruction Time : 0 Correct Marks : 4 Wrong Marks : 1

Identify the mirror of the given word with respect to XX'

TARAIN1014A

1. AƆ101N1AƆAƆ
2. A 101N1AƆAƆ
3. A101N1AƆAƆ
4. AƆ101N1AƆAƆ

Options :

686340144333. 1
686340144334. 2
686340144335. 3
686340144336. 4

Question Number : 84 Question Id : 68634036544 Question Type : MCQ Option Shuffling : No Is Question Mandatory : No Calculator : None Response Time : N.A Think Time : N.A Minimum Instruction Time : 0 Correct Marks : 4 Wrong Marks : 1

X - X¹ के संदर्भ में दिए गए शब्द की दर्पण छवि की पहचान कीजिए:

TARAIN1014A



1. ARAI1014A
2. A 1014NIA RAT
3. A1014TARAIN
4. ARAI1014A

Options :

686340144333. 1
686340144334. 2
686340144335. 3
686340144336. 4

Question Number : 85 Question Id : 68634036545 Question Type : MCQ Option Shuffling : No Is Question Mandatory : No Calculator : None Response Time : N.A Think Time : N.A Minimum Instruction Time : 0

Correct Marks : 4 Wrong Marks : 1

A class stands in a single line. One student is seventeenth in order from both the ends. What is the strength of the class?

1. 35
2. 33
3. 34
4. 32

Options :

686340144337. 1
686340144338. 2
686340144339. 3
686340144340. 4

Question Number : 85 Question Id : 68634036545 Question Type : MCQ Option Shuffling : No Is Question Mandatory : No Calculator : None Response Time : N.A Think Time : N.A Minimum Instruction Time : 0

Correct Marks : 4 Wrong Marks : 1

एक कक्षा के विद्यार्थी एकल पंक्ति में खड़े हुए हैं। एक विद्यार्थी दोनों सिरों से सत्रहवें क्रम में है। तो इस कक्षा में विद्यार्थियों की संख्या क्या है?

1. 35
2. 33
3. 34
4. 32

Options :

686340144337. 1
686340144338. 2
686340144339. 3
686340144340. 4

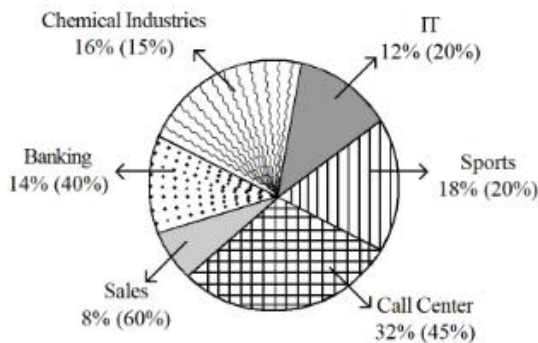
Sub-Section Number : 4
Sub-Section Id : 6863401202
Question Shuffling Allowed : No
Is Section Default? : null

Question Id : 68634036546 Question Type : COMPREHENSION Sub Question Shuffling Allowed : Yes Group Comprehension Questions : No Question Pattern Type : NonMatrix Calculator : None Response Time : N.A Think Time : N.A Minimum Instruction Time : 0

Question Numbers : (86 to 90)

Question Label : Comprehension

Following pie chart give the percentage of people working in the right shift from various industries and the percentage in the respective brackets indicate the percentage of females out of number of people working in the right shift. Total number of people 40250.



Sub questions

Question Number : 86 Question Id : 68634036547 Question Type : MCQ Option Shuffling : No Is Question Mandatory : No Calculator : None Response Time : N.A Think Time : N.A Minimum Instruction Time : 0 Correct Marks : 4 Wrong Marks : 1

What is the percent of women working in sports industry of the total number of people working in the right shifts from all industries together?

1. 3.2
2. 3.6
3. 4.4
4. 5.6

Options :

- 686340144341. 1
- 686340144342. 2
- 686340144343. 3
- 686340144344. 4

Question Number : 87 Question Id : 68634036548 Question Type : MCQ Option Shuffling : No Is Question Mandatory : No Calculator : None Response Time : N.A Think Time : N.A Minimum Instruction Time : 0 Correct Marks : 4 Wrong Marks : 1

What is the respective ratio of men to the women working in right shifts from the call centre industry?

1. 11:9
2. 7:5
3. 8:13
4. 11:7

Options :

- 686340144345. 1
- 686340144346. 2
- 686340144347. 3
- 686340144348. 4

Question Number : 88 Question Id : 68634036549 Question Type : MCQ Option Shuffling : No Is Question Mandatory : No Calculator : None Response Time : N.A Think Time : N.A Minimum Instruction Time : 0 Correct Marks : 4 Wrong Marks : 1

What is the difference between the total number of men and the total number of women working in right shifts from all industries together?

1. 13254
2. 13524
3. 13425
4. 13245

Options :

- 686340144349. 1

686340144350. 2

686340144351. 3

686340144352. 4

Question Number : 89 Question Id : 68634036550 Question Type : MCQ Option Shuffling : No Is Question Mandatory : No Calculator : None Response Time : N.A Think Time : N.A Minimum Instruction Time : 0 Correct Marks : 4 Wrong Marks : 1

What is the approximate average number of females working in right shifts from all the industries together?

1. 4481

2. 3326

3. 2823

4. 2227

Options :

686340144353. 1

686340144354. 2

686340144355. 3

686340144356. 4

Question Number : 90 Question Id : 68634036551 Question Type : MCQ Option Shuffling : No Is Question Mandatory : No Calculator : None Response Time : N.A Think Time : N.A Minimum Instruction Time : 0 Correct Marks : 4 Wrong Marks : 1

What is the total number of men working in right shifts from all the industries together?

1. 28678

2. 26887

3. 25788

4. 23657

Options :

686340144357. 1

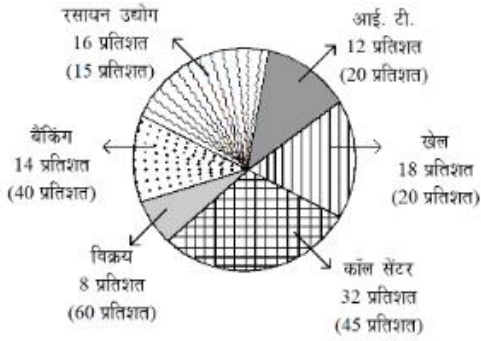
686340144358. 2

686340144359. 3

686340144360. 4

Question Id : 68634036546 Question Type : COMPREHENSION Sub Question Shuffling Allowed : Yes Group Comprehension Questions : No Question Pattern Type : NonMatrix Calculator : None Response Time : N.A Think Time : N.A Minimum Instruction Time : 0 Question Numbers : (86 to 90) Question Label : Comprehension

नीचे दिए गए पाई चार्ट में विभिन्न उद्योगों में रात्रिकालीन पारी में कार्यरत लोगों का प्रतिशत प्रदान किया गया है और क्रमिक कोष्ठक रात्रिकालीन पारी में कार्यरत लोगों की संख्या में से महिलाओं का प्रतिशत इंगित करते हैं। लोगों की कुल संख्या = 40250



Sub questions

Question Number : 86 Question Id : 68634036547 Question Type : MCQ Option Shuffling : No Is Question Mandatory : No Calculator : None Response Time : N.A Think Time : N.A Minimum Instruction Time : 0

Correct Marks : 4 Wrong Marks : 1

सभी उद्योगों को एक साथ मिलाने पर रात्रिकालीन पारी में कार्यरत कुल लोगों की संख्या में से खेल उद्योग में कार्यरत महिलाओं का प्रतिशत क्या है?

1. 3.2
2. 3.6
3. 4.4
4. 5.6

Options :

686340144341. 1
686340144342. 2
686340144343. 3
686340144344. 4

Question Number : 87 Question Id : 68634036548 Question Type : MCQ Option Shuffling : No Is Question Mandatory : No Calculator : None Response Time : N.A Think Time : N.A Minimum Instruction Time : 0

Correct Marks : 4 Wrong Marks : 1

कॉल सेंटर उद्योग की रात्रिकालीन पारी में कार्यरत पुरुषों और महिलाओं का क्या क्रमिक अनुपात है?

1. 11:9
2. 7:5
3. 8:13
4. 11:7

Options :

686340144345. 1
686340144346. 2
686340144347. 3
686340144348. 4

Question Number : 88 Question Id : 68634036549 Question Type : MCQ Option Shuffling : No Is Question Mandatory : No Calculator : None Response Time : N.A Think Time : N.A Minimum Instruction Time : 0

Correct Marks : 4 Wrong Marks : 1

सभी उद्योगों को एक साथ मिलाने पर रात्रिकालीन पारी में कार्यरत पुरुषों की कुल संख्या और महिलाओं की कुल संख्या के बीच क्या अन्तर है?

1. 13254
2. 13524
3. 13425
4. 13245

Options :

686340144349. 1
686340144350. 2
686340144351. 3
686340144352. 4

Question Number : 89 Question Id : 68634036550 Question Type : MCQ Option Shuffling : No Is Question Mandatory : No Calculator : None Response Time : N.A Think Time : N.A Minimum Instruction Time : 0

Correct Marks : 4 Wrong Marks : 1

सभी उद्योगों को एक साथ मिलाने पर उनकी रात्रिकालीन पारी में कार्यरत महिलाओं की संख्या का लगभग औसत क्या है?

1. 4481
2. 3326
3. 2823
4. 2227

Options :

686340144353. 1
686340144354. 2
686340144355. 3
686340144356. 4

Question Number : 90 Question Id : 68634036551 Question Type : MCQ Option Shuffling : No Is Question Mandatory : No Calculator : None Response Time : N.A Think Time : N.A Minimum Instruction Time : 0

Correct Marks : 4 Wrong Marks : 1

सभी उद्योगों को एक साथ मिलाने पर रात्रिकालीन पारी में कार्यरत पुरूषों की कुल संख्या क्या है?

1. 28678
2. 26887
3. 25788
4. 23657

Options :

686340144357. 1
686340144358. 2
686340144359. 3
686340144360. 4

Sub-Section Number :

5

Sub-Section Id :

6863401203

Question Shuffling Allowed :

No

Is Section Default? :

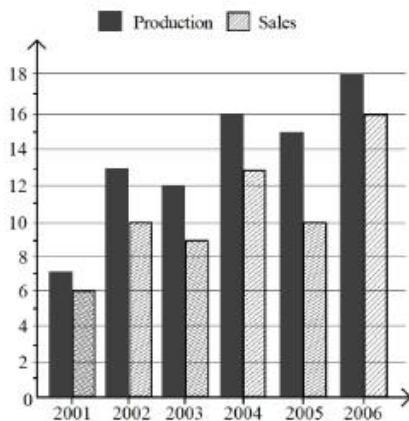
null

Question Id : 68634036552 Question Type : COMPREHENSION Sub Question Shuffling Allowed : Yes Group Comprehension Questions : No Question Pattern Type : NonMatrix Calculator : None Response Time : N.A Think Time : N.A Minimum Instruction Time : 0

Question Numbers : (91 to 95)

Question Label : Comprehension

The amount of production and sales by a company over the years (in lac units) is shown below.



Sub questions

Question Number : 91 Question Id : 68634036553 Question Type : MCQ Option Shuffling : No Is Question Mandatory : No Calculator : None Response Time : N.A Think Time : N.A Minimum Instruction Time : 0

Correct Marks : 4 Wrong Marks : 1

What is the difference of sales of 2003 and 2005 (in thousand units).

1. 1000
2. 50
3. 100
4. 500

Options :

- 686340144361. 1
- 686340144362. 2
- 686340144363. 3
- 686340144364. 4

Question Number : 92 Question Id : 68634036554 Question Type : MCQ Option Shuffling : No Is Question Mandatory : No Calculator : None Response Time : N.A Think Time : N.A Minimum Instruction Time : 0

Correct Marks : 4 Wrong Marks : 1

Total sales of 2001 and 2002 together are approximately what percentage of sales in 2004?

1. 120%
2. 100%
3. 50%
4. 200%

Options :

- 686340144365. 1
- 686340144366. 2
- 686340144367. 3
- 686340144368. 4

Question Number : 93 Question Id : 68634036555 Question Type : MCQ Option Shuffling : No Is Question Mandatory : No Calculator : None Response Time : N.A Think Time : N.A Minimum Instruction Time : 0

Correct Marks : 4 Wrong Marks : 1

In which year the percentage of sales to production is maximum?

1. 2002
2. 2004
3. 2006
4. 2001

Options :

- 686340144369. 1
- 686340144370. 2
- 686340144371. 3

686340144372. 4

Question Number : 94 Question Id : 68634036556 Question Type : MCQ Option Shuffling : No Is Question Mandatory : No Calculator : None Response Time : N.A Think Time : N.A Minimum Instruction Time : 0 Correct Marks : 4 Wrong Marks : 1

What is the approximate percentage increase in production from 2003 to 2004?

1. 25%
2. 33%
3. 70%
4. 100%

Options :

686340144373. 1
686340144374. 2
686340144375. 3
686340144376. 4

Question Number : 95 Question Id : 68634036557 Question Type : MCQ Option Shuffling : No Is Question Mandatory : No Calculator : None Response Time : N.A Think Time : N.A Minimum Instruction Time : 0 Correct Marks : 4 Wrong Marks : 1

What is the percentage drop in sales from 2002 to 2003?

1. 5%
2. 40%
3. 10%
4. 60%

Options :

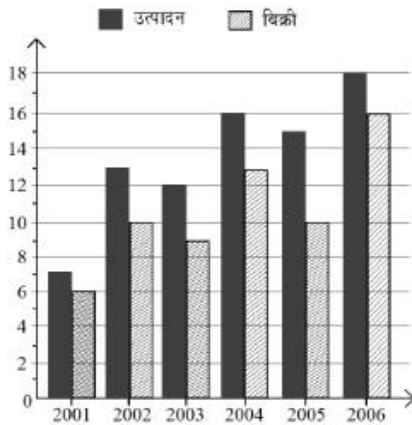
686340144377. 1
686340144378. 2
686340144379. 3
686340144380. 4

Question Id : 68634036552 Question Type : COMPREHENSION Sub Question Shuffling Allowed : Yes Group Comprehension Questions : No Question Pattern Type : NonMatrix Calculator : None Response Time : N.A Think Time : N.A Minimum Instruction Time : 0

Question Numbers : (91 to 95)

Question Label : Comprehension

बीते हुए कई वर्षों में कंपनी के उत्पादन की मात्रा और बिक्री को नीचे दर्शाया गया है (लाख इकाइयों में)।



Sub questions

Question Number : 91 Question Id : 68634036553 Question Type : MCQ Option Shuffling : No Is Question Mandatory : No Calculator : None Response Time : N.A Think Time : N.A Minimum Instruction Time : 0

Correct Marks : 4 Wrong Marks : 1

2003 और 2005 की बिक्री में क्या अंतर (हजार इकाइयों में) है?

1. 1000
2. 50
3. 100
4. 500

Options :

686340144361. 1
686340144362. 2
686340144363. 3
686340144364. 4

Question Number : 92 Question Id : 68634036554 Question Type : MCQ Option Shuffling : No Is Question Mandatory : No Calculator : None Response Time : N.A Think Time : N.A Minimum Instruction Time : 0

Correct Marks : 4 Wrong Marks : 1

2001 और 2002 की कुल बिक्री को एक साथ मिलाने पर वह 2004 में हुई बिक्री की लगभग कितने प्रतिशत है?

1. 120 प्रतिशत
2. 100 प्रतिशत
3. 50 प्रतिशत
4. 200 प्रतिशत

Options :

686340144365. 1

686340144366. 2

686340144367. 3

686340144368. 4

Question Number : 93 Question Id : 68634036555 Question Type : MCQ Option Shuffling : No Is Question Mandatory : No Calculator : None Response Time : N.A Think Time : N.A Minimum Instruction Time : 0 Correct Marks : 4 Wrong Marks : 1

किस वर्ष में उत्पादन की तुलना में बिक्री का प्रतिशत अधिकतम है?

1. 2002

2. 2004

3. 2006

4. 2001

Options :

686340144369. 1

686340144370. 2

686340144371. 3

686340144372. 4

Question Number : 94 Question Id : 68634036556 Question Type : MCQ Option Shuffling : No Is Question Mandatory : No Calculator : None Response Time : N.A Think Time : N.A Minimum Instruction Time : 0 Correct Marks : 4 Wrong Marks : 1

2003 से 2004 तक उत्पादन में वृद्धि का लगभग प्रतिशत क्या है?

1. 25 प्रतिशत

2. 35 प्रतिशत

3. 70 प्रतिशत

4. 100 प्रतिशत

Options :

686340144373. 1

686340144374. 2

686340144375. 3

686340144376. 4

Question Number : 95 Question Id : 68634036557 Question Type : MCQ Option Shuffling : No Is Question Mandatory : No Calculator : None Response Time : N.A Think Time : N.A Minimum Instruction Time : 0 Correct Marks : 4 Wrong Marks : 1

2002 से 2003 तक बिक्री में गिरावट का क्या प्रतिशत है?

1. 5 प्रतिशत
2. 40 प्रतिशत
3. 10 प्रतिशत
4. 60 प्रतिशत

Options :

686340144377. 1
686340144378. 2
686340144379. 3
686340144380. 4

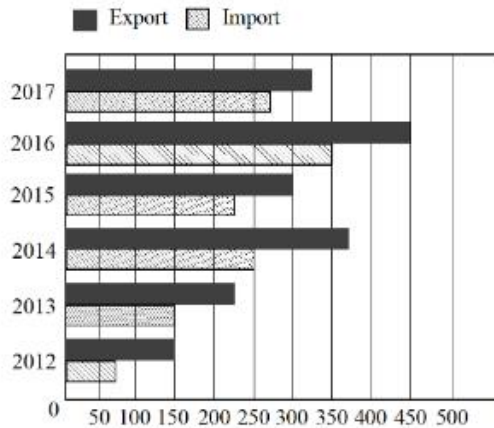
Sub-Section Number : 6
Sub-Section Id : 6863401204
Question Shuffling Allowed : No
Is Section Default? : null

Question Id : 68634036558 Question Type : COMPREHENSION Sub Question Shuffling Allowed : Yes Group Comprehension Questions : No Question Pattern Type : NonMatrix Calculator : None Response Time : N.A Think Time : N.A Minimum Instruction Time : 0

Question Numbers : (96 to 100)

Question Label : Comprehension

The following bar chart represents the value of exports and imports (in ₹ crores) of a country in the given period :



Sub questions

Question Number : 96 Question Id : 68634036559 Question Type : MCQ Option Shuffling : No Is Question Mandatory : No Calculator : None Response Time : N.A Think Time : N.A Minimum Instruction Time : 0 Correct Marks : 4 Wrong Marks : 1

In which year is the difference between the exports and the imports closest to ₹100 crores?

1. 2016
2. 2015
3. 2017
4. 2014

Options :

- 686340144381. 1
- 686340144382. 2
- 686340144383. 3
- 686340144384. 4

Question Number : 97 Question Id : 68634036560 Question Type : MCQ Option Shuffling : No Is Question Mandatory : No Calculator : None Response Time : N.A Think Time : N.A Minimum Instruction Time : 0

Correct Marks : 4 Wrong Marks : 1

The value of exports in 2016 was what percentage of the average value of imports in the years 2014, 2015 and 2017?

1. 200%
2. 180%
3. 150%
4. 100%

Options :

- 686340144385. 1
- 686340144386. 2
- 686340144387. 3
- 686340144388. 4

Question Number : 98 Question Id : 68634036561 Question Type : MCQ Option Shuffling : No Is Question Mandatory : No Calculator : None Response Time : N.A Think Time : N.A Minimum Instruction Time : 0

Correct Marks : 4 Wrong Marks : 1

What is the percentage of exports value of the value of imports in the year 2014?

1. 50%
2. 100%
3. 150%
4. 200%

Options :

- 686340144389. 1
- 686340144390. 2

686340144391. 3

686340144392. 4

Question Number : 99 Question Id : 68634036562 Question Type : MCQ Option Shuffling : No Is Question Mandatory : No Calculator : None Response Time : N.A Think Time : N.A Minimum Instruction Time : 0 Correct Marks : 4 Wrong Marks : 1

What is the approximate difference (in ₹ crores) between the average exports and average imports during the given years?

1. 65

2. 85

3. 105

4. 135

Options :

686340144393. 1

686340144394. 2

686340144395. 3

686340144396. 4

Question Number : 100 Question Id : 68634036563 Question Type : MCQ Option Shuffling : No Is Question Mandatory : No Calculator : None Response Time : N.A Think Time : N.A Minimum Instruction Time : 0 Correct Marks : 4 Wrong Marks : 1

What is the percentage increase in the value of exports in 2016 over 2015?

1. 120%

2. 90%

3. 70%

4. 50%

Options :

686340144397. 1

686340144398. 2

686340144399. 3

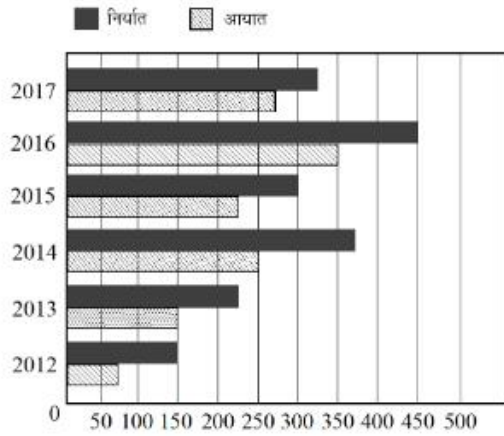
686340144400. 4

Question Id : 68634036558 Question Type : COMPREHENSION Sub Question Shuffling Allowed : Yes Group Comprehension Questions : No Question Pattern Type : NonMatrix Calculator : None Response Time : N.A Think Time : N.A Minimum Instruction Time : 0

Question Numbers : (96 to 100)

Question Label : Comprehension

निम्नलिखित बार चार्ट किसी प्रदत्त अवधि में एक देश के आयात और निर्यात (करोड़ ₹ में) का मूल्य निरूपित करता है?



Sub questions

Question Number : 96 Question Id : 68634036559 Question Type : MCQ Option Shuffling : No Is Question Mandatory : No Calculator : None Response Time : N.A Think Time : N.A Minimum Instruction Time : 0

Correct Marks : 4 Wrong Marks : 1

किस वर्ष में निर्यात और आयात के बीच अंतर ₹ 100 करोड़ के निकटतम था?

1. 2016
2. 2015
3. 2017
4. 2014

Options :

686340144381. 1
686340144382. 2
686340144383. 3
686340144384. 4

Question Number : 97 Question Id : 68634036560 Question Type : MCQ Option Shuffling : No Is Question Mandatory : No Calculator : None Response Time : N.A Think Time : N.A Minimum Instruction Time : 0

Correct Marks : 4 Wrong Marks : 1

2016 में निर्यात का मूल्य वर्ष 2014, 2015 और 2017 में आयात के औसत मूल्य का कितना प्रतिशत था?

1. 200 प्रतिशत
2. 180 प्रतिशत
3. 150 प्रतिशत
4. 100 प्रतिशत

Options :

686340144385. 1

686340144386. 2

686340144387. 3

686340144388. 4

Question Number : 98 Question Id : 68634036561 Question Type : MCQ Option Shuffling : No Is Question Mandatory : No Calculator : None Response Time : N.A Think Time : N.A Minimum Instruction Time : 0 Correct Marks : 4 Wrong Marks : 1

वर्ष 2014 में हुए आयात के मूल्य की तुलना में निर्यात-मूल्य का क्या प्रतिशत है?

1. 50 प्रतिशत
2. 100 प्रतिशत
3. 150 प्रतिशत
4. 200 प्रतिशत

Options :

686340144389. 1

686340144390. 2

686340144391. 3

686340144392. 4

Question Number : 99 Question Id : 68634036562 Question Type : MCQ Option Shuffling : No Is Question Mandatory : No Calculator : None Response Time : N.A Think Time : N.A Minimum Instruction Time : 0 Correct Marks : 4 Wrong Marks : 1

उपर्युक्त दिए गए वर्षों के दौरान औसत निर्यात और औसत आयात के बीच लगभग अंतर (करोड़ ₹ में) क्या है?

1. 65
2. 85
3. 105
4. 135

Options :

686340144393. 1

686340144394. 2

686340144395. 3

686340144396. 4

Question Number : 100 Question Id : 68634036563 Question Type : MCQ Option Shuffling : No Is Question Mandatory : No Calculator : None Response Time : N.A Think Time : N.A Minimum Instruction Time : 0 Correct Marks : 4 Wrong Marks : 1

वर्ष 2015 की तुलना में 2016 में निर्यात के मूल्य में वृद्धि का क्या प्रतिशत है?

1. 120%

2. 90%

3. 70%

4. 50%

Options :

686340144397. 1

686340144398. 2

686340144399. 3

686340144400. 4