

National Testing Agency

Question Paper Name : 22S3
Subject Name : 22Jun2023 Shift3 Subject Combination 1
Creation Date : 2023-06-22 20:03:07
Duration : 270
Total Marks : 1200
Display Marks: Yes

Tibetan

Group Number : 1
Group Id : 485584821
Group Maximum Duration : 45
Group Minimum Duration : 45
Show Attended Group? : No
Edit Attended Group? : No
Break time : 0
Group Marks : 200
Is this Group for Examiner? : No
Examiner permission : Cant View
Show Progress Bar? : No

Tibetan

Section Id : 485584945
Section Number : 1
Section type : Online
Mandatory or Optional : Mandatory
Number of Questions : 50
Number of Questions to be attempted : 40
Section Marks : 200
Enable Mark as Answered Mark for Review and Clear Response : Yes
Maximum Instruction Time : 0
Sub-Section Number : 1
Sub-Section Id : 4855842686
Question Shuffling Allowed : No
Is Section Default? : null
Sub-Section Number : 2
Sub-Section Id : 4855842687
Question Shuffling Allowed : No
Is Section Default? : null
Sub-Section Number : 3
Sub-Section Id : 4855842688
Question Shuffling Allowed : No
Is Section Default? : null
Sub-Section Number : 4
Sub-Section Id : 4855842689
Question Shuffling Allowed : Yes

Is Section Default? : null

Biology

Group Number : 2
Group Id : 485584822
Group Maximum Duration : 45
Group Minimum Duration : 45
Show Attended Group? : No
Edit Attended Group? : No
Break time : 0
Group Marks : 200
Is this Group for Examiner? : No
Examiner permission : Cant View
Show Progress Bar? : No

Biology

Section Id : 485584946
Section Number : 1
Section type : Online
Mandatory or Optional : Mandatory
Number of Questions : 50
Number of Questions to be attempted : 40
Section Marks : 200
Enable Mark as Answered Mark for Review and Clear Response : Yes
Maximum Instruction Time : 0
Sub-Section Number : 1
Sub-Section Id : 4855842690
Question Shuffling Allowed : Yes
Is Section Default? : null

Question Number : 1 Question Id : 48558436386 Question Type : MCQ Option Shuffling : No Is Question Mandatory : No
Calculator : None Response Time : N.A Think Time : N.A Minimum Instruction Time : 0

Correct Marks : 5 Wrong Marks : 1

Question Key Details :

Key	Value
Comprehension	MCQ

Number of chromosomes found in rice gamete is:

1. 8
2. 10
3. 12
4. 14

Options :

485584145541. 1
485584145542. 2
485584145543. 3

Question Number : 1 Question Id : 48558436386 Question Type : MCQ Option Shuffling : No Is Question Mandatory : No Calculator : None Response Time : N.A Think Time : N.A Minimum Instruction Time : 0

Correct Marks : 5 Wrong Marks : 1

Question Key Details :

Key	Value
Comprehension	MCQ

କାଉଁର ଉଦ୍‌ବିଜୟରେ ଚିତ୍ରାଣୁଗଣନା ସଂଖ୍ୟା ହେଉଛି:

1. 8
2. 10
3. 12
4. 14

Options :

- 485584145541. 1
- 485584145542. 2
- 485584145543. 3
- 485584145544. 4

Question Number : 2 Question Id : 48558436387 Question Type : MCQ Option Shuffling : No Is Question Mandatory : No Calculator : None Response Time : N.A Think Time : N.A Minimum Instruction Time : 0

Correct Marks : 5 Wrong Marks : 1

Question Key Details :

Key	Value
Comprehension	MCQ

Match List I with List II

LIST I (Vegetative propagules)		LIST II (Example)	
A.	Leaf buds	I.	Water hyacinth
B.	Rhizome	II.	Agave
C.	Offset	III.	Ginger
D.	Bulbil	IV.	Bryophyllum

Choose the correct answer from the options given below:

1. A-III, B-IV, C-II, D-I
2. A-II, B-IV, C-I, D-III
3. A-IV, B-III, C-I, D-II
4. A-III, B-II, C-IV, D-I

Options :

- 485584145545. 1
- 485584145546. 2
- 485584145547. 3

Question Number : 2 Question Id : 48558436387 Question Type : MCQ Option Shuffling : No Is Question Mandatory : No Calculator : None Response Time : N.A Think Time : N.A Minimum Instruction Time : 0

Correct Marks : 5 Wrong Marks : 1

Question Key Details :

Key	Value
Comprehension	MCQ

କିଣ୍ଠ I କିଣ୍ଠ II ମିଳାଅ

କିଣ୍ଠ I		କିଣ୍ଠ II	
A.	କିଠ ବହୁତ	I.	ଉତ୍ତର ଗୋଲକ
B.	ଗୋଲକୋଳ	II.	ଅକଳ
C.	ଅକଳକୋଳ	III.	ଅକଳ
D.	ଉତ୍ତରକଳ	IV.	ଉତ୍ତରକୋଳକୋଳ

ନିମ୍ନ ବିକଳ୍ପ ମଧ୍ୟରୁ ଯେକି ଉତ୍ତର ବାଛନ୍ତୁ:

1. A-III, B-IV, C-II, D-I
2. A-II, B-IV, C-I, D-III
3. A-IV, B-III, C-I, D-II
4. A-III, B-II, C-IV, D-I

Options :

485584145545. 1
485584145546. 2
485584145547. 3
485584145548. 4

Question Number : 3 Question Id : 48558436388 Question Type : MCQ Option Shuffling : No Is Question Mandatory : No Calculator : None Response Time : N.A Think Time : N.A Minimum Instruction Time : 0

Correct Marks : 5 Wrong Marks : 1

Question Key Details :

Key	Value
Comprehension	MCQ

Residual and persistent nucellus present in some seeds is called:

1. Seed coat
2. Pericarp
3. Perisperm
4. Achene

Options :

485584145549. 1

485584145550. 2
485584145551. 3
485584145552. 4

Question Number : 3 Question Id : 48558436388 Question Type : MCQ Option Shuffling : No Is Question Mandatory : No Calculator : None Response Time : N.A Think Time : N.A Minimum Instruction Time : 0

Correct Marks : 5 Wrong Marks : 1

Question Key Details :

Key	Value
Comprehension	MCQ

ଜିବି ମଞ୍ଜିରେ ଉପସ୍ଥିତ ଅବଶିଷ୍ଟାଂଶ ଏବଂ କ୍ରମାଗତ ଦୁ୍ୟସେକ୍ସ୍ ସେକା:

1. ସିଡ଼ କୋଚ
2. ପେରିକାର୍ପ
3. ପେରିସ୍ପର୍ମ
4. ଆସିର

Options :

485584145549. 1
485584145550. 2
485584145551. 3
485584145552. 4

Question Number : 4 Question Id : 48558436389 Question Type : MCQ Option Shuffling : No Is Question Mandatory : No Calculator : None Response Time : N.A Think Time : N.A Minimum Instruction Time : 0

Correct Marks : 5 Wrong Marks : 1

Question Key Details :

Key	Value
Comprehension	MCQ

The wall layer which provides nourishment to the developing pollen grains is called:

1. Epidermis
2. Endothecium
3. Middle Layer
4. Tapetum

Options :

485584145553. 1
485584145554. 2
485584145555. 3
485584145556. 4

Question Number : 4 Question Id : 48558436389 Question Type : MCQ Option Shuffling : No Is Question Mandatory : No Calculator : None Response Time : N.A Think Time : N.A Minimum Instruction Time : 0

Correct Marks : 5 Wrong Marks : 1

Question Key Details :

Key	Value
Comprehension	MCQ

ବହୁଥିବା ଯୋନୋମ ଗ୍ରେନ କୁ ଯୋଗକରା ଯୋଗାଉଥିବା କାଳ ଖର ହେଲା:

1. ଏପିଡ଼ିମିସ୍
2. ଏଣ୍ଡୋଥେଲିଅମ୍
3. ମିଡିଲଲେୟର (ମାଧ୍ୟମ ଖର)
4. ଡାପେରମ୍

Options :

- 485584145553. 1
- 485584145554. 2
- 485584145555. 3
- 485584145556. 4

Question Number : 5 Question Id : 48558436390 Question Type : MCQ Option Shuffling : No Is Question Mandatory : No Calculator : None Response Time : N.A Think Time : N.A Minimum Instruction Time : 0

Correct Marks : 5 Wrong Marks : 1

Question Key Details :

Key	Value
Comprehension	MCQ

Spermiation is the _____.

1. Process of release of sperms from the seminiferous tubules
2. Process of formation of sperms
3. Transformation of spermatids into sperms
4. Process of formation of spermatogonia

Options :

- 485584145557. 1
- 485584145558. 2
- 485584145559. 3
- 485584145560. 4

Question Number : 5 Question Id : 48558436390 Question Type : MCQ Option Shuffling : No Is Question Mandatory : No Calculator : None Response Time : N.A Think Time : N.A Minimum Instruction Time : 0

Correct Marks : 5 Wrong Marks : 1

Question Key Details :

Key	Value
Comprehension	MCQ

ଶୁକ୍ର ସୃଷ୍ଟି ହେବା _____ ।

1. ଯେମିତିଯେଉଁଠି ତୃ୍ୟବନ୍ଧୁ ରୁ ଶୁକ୍ରାଣୁ ବାହାରିବାର ପ୍ରକ୍ରିୟା
2. ଶୁକ୍ରାଣୁ ଗଠନର ପ୍ରକ୍ରିୟା
3. ସର୍ମାଚିତ୍ ରୁ ଶୁକ୍ରାଣୁ କୁ ରୂପ ପରିବର୍ତ୍ତନ
4. ସର୍ମାଗୋଲୋନିଆ ଗଠନର ପ୍ରକ୍ରିୟା

Options :

- 485584145557. 1
- 485584145558. 2
- 485584145559. 3
- 485584145560. 4

Question Number : 6 Question Id : 48558436391 Question Type : MCQ Option Shuffling : No Is Question Mandatory : No Calculator : None Response Time : N.A Think Time : N.A Minimum Instruction Time : 0

Correct Marks : 5 Wrong Marks : 1

Question Key Details :

Key	Value
Comprehension	MCQ

Which of the following hormones are secreted by placenta?

- A. hCG
- B. hPL
- C. Estrogens
- D. Progestogens
- E. Relaxin

Choose the correct answer from the options given below:

1. A, B, and E only
2. A, B, C and E only
3. A, B, D and E only
4. A, B, C and D only

Options :

- 485584145561. 1
- 485584145562. 2
- 485584145563. 3
- 485584145564. 4

Question Number : 6 Question Id : 48558436391 Question Type : MCQ Option Shuffling : No Is Question Mandatory : No Calculator : None Response Time : N.A Think Time : N.A Minimum Instruction Time : 0

Correct Marks : 5 Wrong Marks : 1

Question Key Details :

Key	Value
-----	-------

ପ୍ରାୟେକ୍ଷା କ୍ଷୀରା ନିମ୍ନଲିଖିତ ମଧ୍ୟରୁ କେଉଁ ହରମୋନ ଛରଣ ହୁଏ?

- A. ଏଚ୍.ପି.ଭି.
- B. ଏଚ୍.ପି.ଏଲ୍.
- C. ଏଷ୍ଟ୍ରୋଜେନ୍
- D. ପ୍ରୋଲକ୍ଟୋଜେନ୍
- E. ଚିକାକ୍ସିନ୍

ନିମ୍ନ ବିକଳ୍ପ ମଧ୍ୟରୁ ସଠିକ୍ ଉତ୍ତର ଗଢ଼ନ୍ତୁ:

- 1. କେବଳ A, B ଏବଂ E
- 2. କେବଳ A, B ଏବଂ E
- 3. କେବଳ A, B, D ଏବଂ E
- 4. କେବଳ A, B, C ଏବଂ D

Options :

- 485584145561. 1
- 485584145562. 2
- 485584145563. 3
- 485584145564. 4

Question Number : 7 Question Id : 48558436392 Question Type : MCQ Option Shuffling : No Is Question Mandatory : No Calculator : None Response Time : N.A Think Time : N.A Minimum Instruction Time : 0

Correct Marks : 5 Wrong Marks : 1

Question Key Details :

Key	Value
Comprehension	MCQ

Which of the following disease is completely curable if detected early?

- 1. Genital herpes
- 2. HIV infections
- 3. Hepatitis-B
- 4. Trichomoniasis

Options :

- 485584145565. 1
- 485584145566. 2
- 485584145567. 3
- 485584145568. 4

Question Number : 7 Question Id : 48558436392 Question Type : MCQ Option Shuffling : No Is Question Mandatory : No Calculator : None Response Time : N.A Think Time : N.A Minimum Instruction Time : 0

Correct Marks : 5 Wrong Marks : 1

Question Key Details :

Key	Value
Comprehension	MCQ

ନିମ୍ନଲିଖିତ ମଧ୍ୟରୁ କେଉଁ ରୋଗଟି ସମ୍ପୂର୍ଣ୍ଣ ଭାବେ ଚିକିତ୍ସା କରିହେବ, ଯଦି ଆରମ୍ଭରୁ ଜଣାପଡ଼ିଯାଏ?

1. ଜେନିଟାଲ ହର୍ପିସ
2. ଏଚ୍.ଆଇ.ଭି. ସଂକ୍ରମଣ
3. ହେପାଟାଇଟିସ୍-ବି
4. ଟ୍ରିକୋମୋନିଆସିସ

Options :

485584145565. 1
485584145566. 2
485584145567. 3
485584145568. 4

Question Number : 8 Question Id : 48558436393 Question Type : MCQ Option Shuffling : No Is Question Mandatory : No
Calculator : None Response Time : N.A Think Time : N.A Minimum Instruction Time : 0

Correct Marks : 5 Wrong Marks : 1

Question Key Details :

Key	Value
Comprehension	MCQ

Identify the terminal methods to prevent pregnancy.

- A. Tubectomy
- B. Vasectomy
- C. IUDs
- D. Cervical caps

Choose the correct answer from the options given below:

1. A and D only
2. A and C only
3. B and D only
4. A and B only

Options :

485584145569. 1
485584145570. 2
485584145571. 3
485584145572. 4

Question Number : 8 Question Id : 48558436393 Question Type : MCQ Option Shuffling : No Is Question Mandatory : No
Calculator : None Response Time : N.A Think Time : N.A Minimum Instruction Time : 0

Correct Marks : 5 Wrong Marks : 1

Question Key Details :

Key	Value
Comprehension	MCQ

ଗର୍ଭଧାରଣା ନିରୋଧ କରିବା ପାଇଁ ଚର୍ମିନାଲ ପ୍ରକ୍ରିୟାକୁ ଚିହ୍ନଟ କରନ୍ତୁ।

- A. ଟ୍ରୋଫୋଗ୍ଲି
- B. ଲାସେଗ୍ଲୋମି
- C. ଆଇ.ୟୁ.ଡିଏ.
- D. ଯର୍ଭାକାଲ ଜ୍ୟାପସ

ନିମ୍ନ ବିକଳ ମଧ୍ୟରୁ ସଠିକ୍ ଉତ୍ତର ବାଛନ୍ତୁ:

- 1. କେବଳ A ଏବଂ D
- 2. କେବଳ A ଏବଂ C
- 3. କେବଳ B ଏବଂ D
- 4. କେବଳ A ଏବଂ B

Options :

- 485584145569. 1
- 485584145570. 2
- 485584145571. 3
- 485584145572. 4

Question Number : 9 Question Id : 48558436394 Question Type : MCQ Option Shuffling : No Is Question Mandatory : No Calculator : None Response Time : N.A Think Time : N.A Minimum Instruction Time : 0

Correct Marks : 5 Wrong Marks : 1

Question Key Details :

Key	Value
Comprehension	MCQ

The person with karyotype 44+XXY is suffering from:

- 1. Down's Syndrome
- 2. Klinefelter's Syndrome
- 3. Turner's Syndrome
- 4. Edward's Syndrome

Options :

- 485584145573. 1
- 485584145574. 2
- 485584145575. 3
- 485584145576. 4

Question Number : 9 Question Id : 48558436394 Question Type : MCQ Option Shuffling : No Is Question Mandatory : No Calculator : None Response Time : N.A Think Time : N.A Minimum Instruction Time : 0

Correct Marks : 5 Wrong Marks : 1

Question Key Details :

Key	Value
Comprehension	MCQ

ଯେଉଁ ବ୍ୟକ୍ତିଙ୍କର କାରୋଟାଇପ୍ 44+XXY ଥାଏ, ସେ କେଉଁ ରୋଗରେ ଆକ୍ରାନ୍ତ:

1. ଭାଉଜ ସିଣ୍ଡ୍ରୋମ
2. କ୍ଲିନଫେଲଟର ସିଣ୍ଡ୍ରୋମ
3. ଜର୍ମିନ ସିଣ୍ଡ୍ରୋମ
4. ଏଡ୍‌ସ୍‌ସାର୍ଟ ସିଣ୍ଡ୍ରୋମ

Options :

- 485584145573. 1
- 485584145574. 2
- 485584145575. 3
- 485584145576. 4

Question Number : 10 Question Id : 48558436395 Question Type : MCQ Option Shuffling : No Is Question Mandatory : No Calculator : None Response Time : N.A Think Time : N.A Minimum Instruction Time : 0

Correct Marks : 5 Wrong Marks : 1

Question Key Details :

Key	Value
Comprehension	MCQ

Select the mendelian disorders from the following:

- A. Thalassemia
- B. Turner's Syndrome
- C. Cystic Fibrosis
- D. Sickle cell anaemia

Choose the *correct answer* from the options given below:

1. B and D only
2. A, C and D only
3. B, C and D only
4. A and D only

Options :

- 485584145577. 1
- 485584145578. 2
- 485584145579. 3
- 485584145580. 4

Question Number : 10 Question Id : 48558436395 Question Type : MCQ Option Shuffling : No Is Question Mandatory : No Calculator : None Response Time : N.A Think Time : N.A Minimum Instruction Time : 0

Correct Marks : 5 Wrong Marks : 1

Question Key Details :

Key	Value
Comprehension	MCQ

ନିମ୍ନଲିଖିତ ମଧ୍ୟରୁ ମେଣ୍ଡେଲିଆନ୍ ବ୍ୟାଧି ତତ୍ତ୍ୱ କରନ୍ତୁ

- A. ଥାଲସିମିଆ
- B. ଚର୍ଣ୍ଣାକ୍ଷ ସିଣ୍ଡ୍ରୋମ
- C. ସିଡ୍ଡିକ ଫାଇବ୍ରୋସିସ
- D. ସିଡ୍ଡିକସେକ ରକ୍ତହୀନତା

ନିମ୍ନଲିଖିତ ବିକଳ ମଧ୍ୟରୁ ସଠିକ୍ ଉତ୍ତରଟି ବାଛନ୍ତୁ:

- 1. କେବଳ B, D
- 2. କେବଳ A, C, D
- 3. କେବଳ B, C, D
- 4. କେବଳ A, D

Options :

- 485584145577. 1
- 485584145578. 2
- 485584145579. 3
- 485584145580. 4

Question Number : 11 Question Id : 48558436396 Question Type : MCQ Option Shuffling : No Is Question Mandatory : No Calculator : None Response Time : N.A Think Time : N.A Minimum Instruction Time : 0

Correct Marks : 5 Wrong Marks : 1

Question Key Details :

Key	Value
Comprehension	MCQ

Match List I with List II

LIST I		LIST II	
A.	Phenotype reflects the contribution of each allele	I.	Pleiotropy
B.	Multiple phenotypic expressions by a single gene	II.	Linkage
C.	Generation of non-parental gene combinations	III.	Polygenic inheritance
D.	Parental gene combinations higher than non-parental type in F ₂ progeny	IV.	Recombination

Choose the correct answer from the options given below:

1. A-III, B-I, C-IV, D-II
2. A-I, B-IV, C-II, D-III
3. A-III, B-IV, C-I, D-II
4. A-I, B-III, C-II, D-IV

Options :

485584145581. 1
485584145582. 2
485584145583. 3
485584145584. 4

Question Number : 11 Question Id : 48558436396 Question Type : MCQ Option Shuffling : No Is Question Mandatory : No Calculator : None Response Time : N.A Think Time : N.A Minimum Instruction Time : 0

Correct Marks : 5 Wrong Marks : 1

Question Key Details :

Key	Value
Comprehension	MCQ

ଲିଷ୍ଟ I ସହ ଲିଷ୍ଟ II ମିଶାନ୍ତୁ

ଲିଷ୍ଟ I		ଲିଷ୍ଟ II	
A.	ପ୍ରତ୍ୟେକ ଏକିକ ର ପୋଲିପେପ୍ଟିଡ୍ କୁ ଫେରନୋଗ୍ରାଫି ପ୍ରତିପାଦିତ କରେ	I.	ସେଲ୍ ଓଷ୍ଟ୍ରାପି
B.	ଏକତ ଚିତ୍ର ଦ୍ୱାରା ବହୁ ଫେରନୋଗ୍ରାଫି ର ସୂଚକ	II.	ଲିଜେଜ
C.	ଅଣ-ପିତାମାତା ଜିନ ବିନ୍ୟାଶର ସୂଚକ	III.	ବହୁଲିନିତ୍ତ ବ୍ୟତୀତ୍ତରତେ
D.	S_2 ପରମିତେ ଅଣ-ପିତାମାତା ଚିତ୍ର ତୁଳନାରେ ଅଧିକ ପିତାମାତା ଚିତ୍ର	IV.	ପୁରା ବିନ୍ୟାଶ

ନିମ୍ନଲିଖିତ ବିକଳ୍ପ ମଧ୍ୟରୁ ସଠିକ୍ ଉତ୍ତରଟି ଚାଛନ୍ତୁ:

1. A-III, B-I, C-IV, D-II
2. A-I, B-IV, C-II, D-III
3. A-III, B-IV, C-I, D-II
4. A-I, B-III, C-II, D-IV

Options :

485584145581. 1
 485584145582. 2
 485584145583. 3
 485584145584. 4

Question Number : 12 Question Id : 48558436397 Question Type : MCQ Option Shuffling : No Is Question Mandatory : No Calculator : None Response Time : N.A Think Time : N.A Minimum Instruction Time : 0

Correct Marks : 5 Wrong Marks : 1

Question Key Details :

Key	Value
Comprehension	MCQ

Point mutations means:

1. Change in one base pair
2. Change in one allele
3. Change of base pair at a location without any significance
4. Addition or deletion of codons in multiple of three at a point

Options :

485584145585. 1
 485584145586. 2
 485584145587. 3
 485584145588. 4

Question Number : 12 Question Id : 48558436397 Question Type : MCQ Option Shuffling : No Is Question Mandatory : No Calculator : None Response Time : N.A Think Time : N.A Minimum Instruction Time : 0

Correct Marks : 5 Wrong Marks : 1

Question Key Details :

Key	Value
Comprehension	MCQ

ଉତ୍ତର ଦିଅନ୍ତୁ:

1. ଗୋଟିଏ ବେସ ଯୋଡ଼ା ର ପରିବର୍ତ୍ତନ
2. ଗୋଟିଏ ଏମିନୋ ର ପରିବର୍ତ୍ତନ
3. ଗୋଟିଏ ବେସ ଯୋଡ଼ା ର କୌଣସି ସ୍ଥାନରେ ପରିବର୍ତ୍ତନ ଯାହା ସୁସ୍ଥ ହୁଏ
4. ଏକକ ବିନ୍ଦୁରେ ତିନିର ପୁଣିତକ ଭାବେ କେବଳ ପୁଣିତକ ସମସ୍ତ ଥିବା ବିଶେଷ

Options :

- 485584145585. 1
- 485584145586. 2
- 485584145587. 3
- 485584145588. 4

Question Number : 13 Question Id : 48558436398 Question Type : MCQ Option Shuffling : No Is Question Mandatory : No Calculator : None Response Time : N.A Think Time : N.A Minimum Instruction Time : 0

Correct Marks : 5 Wrong Marks : 1

Question Key Details :

Key	Value
Comprehension	MCQ

Which of the following is a stop codon?

1. UAC
2. UAG
3. UAU
4. AUG

Options :

- 485584145589. 1
- 485584145590. 2
- 485584145591. 3
- 485584145592. 4

Question Number : 13 Question Id : 48558436398 Question Type : MCQ Option Shuffling : No Is Question Mandatory : No Calculator : None Response Time : N.A Think Time : N.A Minimum Instruction Time : 0

Correct Marks : 5 Wrong Marks : 1

Question Key Details :

Key	Value
Comprehension	MCQ

ନିମ୍ନଲିଖିତ ମଧ୍ୟରୁ କେଉଁଟି ଅପ କଡନ ଅଟେ?

1. UAC
2. UAG
3. UAU
4. AUG

Options :

485584145589. 1
485584145590. 2
485584145591. 3
485584145592. 4

Question Number : 14 Question Id : 48558436399 Question Type : MCQ Option Shuffling : No Is Question Mandatory : No Calculator : None Response Time : N.A Think Time : N.A Minimum Instruction Time : 0

Correct Marks : 5 Wrong Marks : 1

Question Key Details :

Key	Value
Comprehension	MCQ

Match List I with List II

LIST I (Codes)		LIST II (Codes for)	
A.	UUU	I.	Phenylalanine
B.	AUG	II.	Initiator codon
C.	UAA	III.	Terminator codon
D.	GUU	IV.	Valine

Choose the correct answer from the options given below:

1. A-I, B-II, C-III, D-IV
2. A-II, B-I, C-III, D-IV
3. A-I, B-II, C-IV, D-III
4. A-III, B-IV, C-I, D-II

Options :

485584145593. 1
485584145594. 2
485584145595. 3
485584145596. 4

Question Number : 14 Question Id : 48558436399 Question Type : MCQ Option Shuffling : No Is Question Mandatory : No Calculator : None Response Time : N.A Think Time : N.A Minimum Instruction Time : 0

Correct Marks : 5 Wrong Marks : 1

Question Key Details :

Key	Value
-----	-------

ଲିଙ୍ଗ I ସହ ଲିଙ୍ଗ II ମିଶାନ୍ତୁ

ଲିଙ୍ଗ I (Codes)		ଲିଙ୍ଗ II (Codes for)	
A.	UUU	I.	ଫିନାଲାଇନାସନ୍
B.	AUG	II.	ଆରମ୍ଭ କରୁଥିବା କୋଡନ୍
C.	UAA	III.	ସମାପ୍ତକାରୀ କୋଡନ୍
D.	GUU	IV.	ଗ୍ଲାଇସିନ୍

ନିମ୍ନଲିଖିତ ବିକଳ୍ପ ମଧ୍ୟରୁ ସଠିକ୍ ଉତ୍ତରଟି ଚାଛନ୍ତୁ:

1. A-I, B-II, C-III, D-IV
2. A-II, B-I, C-III, D-IV
3. A-I, B-II, C-IV, D-III
4. A-III, B-IV, C-I, D-II

Options :

485584145593. 1
485584145594. 2
485584145595. 3
485584145596. 4

Question Number : 15 Question Id : 48558436400 Question Type : MCQ Option Shuffling : No Is Question Mandatory : No Calculator : None Response Time : N.A Think Time : N.A Minimum Instruction Time : 0

Correct Marks : 5 Wrong Marks : 1

Question Key Details :

Key	Value
Comprehension	MCQ

Multiple additions of new genes or alleles to the new population and their loss from the old population of a particular place due to migration is known as:

1. Gene flow
2. Genetic drift
3. Mutation
4. Natural selection

Options :

485584145597. 1
485584145598. 2
485584145599. 3
485584145600. 4

Question Number : 15 Question Id : 48558436400 Question Type : MCQ Option Shuffling : No Is Question Mandatory : No Calculator : None Response Time : N.A Think Time : N.A Minimum Instruction Time : 0

Correct Marks : 5 Wrong Marks : 1

Question Key Details :

Key	Value
Comprehension	MCQ

ସ୍ନାନାତାକରଣ ହେତୁ କୌଣସି ଏକ ନିର୍ଦ୍ଦିଷ୍ଟ ସ୍ଥାନରେ ଏକାଧିକ ଜିନ ବା ଏଲିଲର ନିଶ୍ଚିତ ଏବଂ ସେଗୁଡ଼ିକୁ ପୁରୁଣା ଜନସଂଖ୍ୟାରୁ ଜମ୍ ହେବାକୁ କଣ କୁହାଯାଏ:

1. ଜିନ ପ୍ରବାହ
2. ଜେନେଟିକ ଡ୍ରିଫ୍ଟ
3. ପୁନେସନ
4. ପ୍ରାକୃତିକ ଚୟନ

Options :

- 485584145597. 1
- 485584145598. 2
- 485584145599. 3
- 485584145600. 4

Question Number : 16 Question Id : 48558436401 Question Type : MCQ Option Shuffling : No Is Question Mandatory : No Calculator : None Response Time : N.A Think Time : N.A Minimum Instruction Time : 0

Correct Marks : 5 Wrong Marks : 1

Question Key Details :

Key	Value
Comprehension	MCQ

Australian marsupials show the phenomena of:

1. Convergent evolution
2. Adaptive radiation
3. Isolation
4. Saltation

Options :

- 485584145601. 1
- 485584145602. 2
- 485584145603. 3
- 485584145604. 4

Question Number : 16 Question Id : 48558436401 Question Type : MCQ Option Shuffling : No Is Question Mandatory : No Calculator : None Response Time : N.A Think Time : N.A Minimum Instruction Time : 0

Correct Marks : 5 Wrong Marks : 1

Question Key Details :

Key	Value
-----	-------

ଅଣୁଜିଆଆର ମାନସ୍ତପିଆଳ ଚେର କ୍ରିୟା ବର୍ଗାଡ଼ି:

1. କନଭର୍ସେଣ୍ଟ କ୍ରମ ବିକାଶ
2. ଅନୁକୂଳ ବିକିରଣ
3. ବିଲିନତା
4. ଲବଣୀକରଣ

Options :

485584145601. 1
485584145602. 2
485584145603. 3
485584145604. 4

Question Number : 17 Question Id : 48558436402 Question Type : MCQ Option Shuffling : No Is Question Mandatory : No Calculator : None Response Time : N.A Think Time : N.A Minimum Instruction Time : 0

Correct Marks : 5 Wrong Marks : 1

Question Key Details :

Key	Value
Comprehension	MCQ

Identify the examples of evolution caused due to anthropogenic actions:

- A. *Bacillus thuringiensis* and Lepidopterans
- B. Industrial melanism in moths
- C. Resistant microbes against antibiotics
- D. Pesticides and insects

Choose the correct answer from the options given below:

1. A, B and C only
2. A, B and D only
3. B, C and D only
4. A, C and D Only

Options :

485584145605. 1
485584145606. 2
485584145607. 3
485584145608. 4

Question Number : 17 Question Id : 48558436402 Question Type : MCQ Option Shuffling : No Is Question Mandatory : No Calculator : None Response Time : N.A Think Time : N.A Minimum Instruction Time : 0

Correct Marks : 5 Wrong Marks : 1

Question Key Details :

Key	Value
-----	-------

ଆକ୍ସୋପୋଲେଟିକ କାର୍ଯ୍ୟକଳାପ ହେତୁ ସ୍ୱତନ୍ତ୍ର ବ୍ରମାଣତ ପରିବର୍ତ୍ତନ ର ବ୍ୟାଞ୍ଚନା ଚିହ୍ନଟ କରନ୍ତୁ:

- A. ବାକିଲସ ଥୁରିଜେନସିସ ଏବଂ ଲିପିଡୋପିଲେଗାନ୍ସ
- B. ପୋକମାଳଙ୍କ ମଧ୍ୟରେ ଶିଳ୍ପ ମେଲାନିଜିମ
- C. ଆଣ୍ଡିନାୟୋଟିକ ବିରୁଦ୍ଧରେ ପ୍ରତିରୋଧକ ମାଇକ୍ରୋବସ୍
- D. କାଟନାଉଜ ଏବଂ ବାଟ

ନିମ୍ନଲିଖିତ ଚିକିତ୍ସା ମଧ୍ୟରୁ ଯାହା ଉପରୋକ୍ତ ବାକିଲ୍ସ:

- 1. A, B, C
- 2. A, B, D
- 3. B, C, D
- 4. A, C, D

Options :

- 485584145605. 1
- 485584145606. 2
- 485584145607. 3
- 485584145608. 4

Question Number : 18 Question Id : 48558436403 Question Type : MCQ Option Shuffling : No Is Question Mandatory : No Calculator : None Response Time : N.A Think Time : N.A Minimum Instruction Time : 0

Correct Marks : 5 Wrong Marks : 1

Question Key Details :

Key	Value
Comprehension	MCQ

The presence of which disease is confirmed by Widal Test?

- 1. Malaria
- 2. Pneumonia
- 3. Typhoid
- 4. AIDS

Options :

- 485584145609. 1
- 485584145610. 2
- 485584145611. 3
- 485584145612. 4

Question Number : 18 Question Id : 48558436403 Question Type : MCQ Option Shuffling : No Is Question Mandatory : No Calculator : None Response Time : N.A Think Time : N.A Minimum Instruction Time : 0

Correct Marks : 5 Wrong Marks : 1

Question Key Details :

Key	Value
Comprehension	MCQ

ପିତାଳ ରେଖ ବାବା କେଉଁ ରୋଗ ର ପୁଞ୍ଜି ହୋଇଥାଏ?

1. ପ୍ଲାଜ୍ମୋଡିଆ
2. କ୍ୱାମୋଡିଆ
3. ବାକ୍ଟିରିଆ
4. ଏଡୁ

Options :

485584145609. 1
 485584145610. 2
 485584145611. 3
 485584145612. 4

Question Number : 19 Question Id : 48558436404 Question Type : MCQ Option Shuffling : No Is Question Mandatory : No Calculator : None Response Time : N.A Think Time : N.A Minimum Instruction Time : 0

Correct Marks : 5 Wrong Marks : 1

Question Key Details :

Key	Value
Comprehension	MCQ

Arrange the stages of HIV infection in humans sequentially.

- A. Introduction of viral DNA in the cell
- B. Production of multiple viruses
- C. Infection of human cell by virus
- D. Incorporation of viral DNA into host genome

Choose the correct answer from the options given below:

1. A, B, D, C
2. C, A, D, B
3. D, A, B, C
4. B, A, D, C

Options :

485584145613. 1
 485584145614. 2
 485584145615. 3
 485584145616. 4

Question Number : 19 Question Id : 48558436404 Question Type : MCQ Option Shuffling : No Is Question Mandatory : No Calculator : None Response Time : N.A Think Time : N.A Minimum Instruction Time : 0

Correct Marks : 5 Wrong Marks : 1

Question Key Details :

Key	Value
Comprehension	MCQ

ମଣିଷ ମଧ୍ୟରେ ଏଚ୍.ଆଇ.ଭି. (HIV) ସଂକ୍ରମଣର ସୋପାନକୁ କ୍ରମରେ ସଜାଡ଼ି ଲେଖନ୍ତୁ।

- A. କୋଷରେ ଭାଗଗଲା ତି.ଏନ୍.ଏ. ର ଆରମ୍ଭ
- B. ଏକାଧିକ ଭାଇରସର ଗଠନ
- C. ଭାଇରସ ଦ୍ୱାରା ମଣିଷ କୋଷ ସଂକ୍ରମଣ
- D. ହୋଷ୍ଟ ଚେନୋମ ରେ ଭାଗଗଲା ତି.ଏନ୍.ଏ. ର ମିଶ୍ରଣ

ନିମ୍ନଲିଖିତ ଚିକିତ୍ସା ମଧ୍ୟରୁ ସଠିକ୍ ଉତ୍ତରଟି ବାଛନ୍ତୁ:

- 1. A, B, D, C
- 2. C, A, D, B
- 3. D, A, B, C
- 4. B, A, D, C

Options :

- 485584145613. 1
- 485584145614. 2
- 485584145615. 3
- 485584145616. 4

Question Number : 20 Question Id : 48558436405 Question Type : MCQ Option Shuffling : No Is Question Mandatory : No Calculator : None Response Time : N.A Think Time : N.A Minimum Instruction Time : 0

Correct Marks : 5 Wrong Marks : 1

Question Key Details :

Key	Value
Comprehension	MCQ

Match List I with List II

LIST I Causal organism		LIST II Disease	
A.	<i>Wuchereria bancrofti</i>	I.	Ringworm
B.	<i>Microsporium</i>	II.	Elephantiasis
C.	<i>Entamoeba histolytica</i>	III.	Malaria
D.	<i>Plasmodium vivax</i>	IV.	Amoebiasis

Choose the correct answer from the options given below:

- 1. A-II, B-I, C-IV, D-III
- 2. A-I, B-II, C-III, D-IV
- 3. A-IV, B-III, C-II, D-I
- 4. A-I, B-II, C-IV, D-III

Options :

- 485584145617. 1
- 485584145618. 2
- 485584145619. 3
- 485584145620. 4

Question Number : 20 Question Id : 48558436405 Question Type : MCQ Option Shuffling : No Is Question Mandatory : No Calculator : None Response Time : N.A Think Time : N.A Minimum Instruction Time : 0

Correct Marks : 5 Wrong Marks : 1

Question Key Details :

Key	Value
Comprehension	MCQ

କିଣ୍ଠ I ସହ କିଣ୍ଠ II ମିଶାନ୍ତୁ

କିଣ୍ଠ I		କିଣ୍ଠ II	
A.	ନିରାକାର କେନ୍ଦ୍ର	I.	କିରଣ
B.	ନିରାକାର କେନ୍ଦ୍ର	II.	କିରଣ
C.	କେନ୍ଦ୍ର ବିନ୍ଦୁ ବିଶିଷ୍ଟ	III.	ନିରାକାର
D.	କେନ୍ଦ୍ର ବିନ୍ଦୁ ବିଶିଷ୍ଟ	IV.	କେନ୍ଦ୍ର ବିନ୍ଦୁ

ନିମ୍ନଲିଖିତ ବିକଳ ମଧ୍ୟରୁ ସଠିକ୍ ଉତ୍ତରଟି ବାଛନ୍ତୁ:

- 1. A-II, B-I, C-IV, D-III
- 2. A-I, B-II, C-III, D-IV
- 3. A-IV, B-III, C-II, D-I
- 4. A-I, B-II, C-IV, D-III

Options :

- 485584145617. 1
- 485584145618. 2
- 485584145619. 3
- 485584145620. 4

Question Number : 21 Question Id : 48558436406 Question Type : MCQ Option Shuffling : No Is Question Mandatory : No Calculator : None Response Time : N.A Think Time : N.A Minimum Instruction Time : 0

Correct Marks : 5 Wrong Marks : 1

Question Key Details :

Key	Value
Comprehension	MCQ

Homozygosity is achieved through :

1. Recombinant DNA technology
2. Vaccination
3. Inbreeding
4. Hybridoma technology

Options :

485584145621. 1
485584145622. 2
485584145623. 3
485584145624. 4

Question Number : 21 Question Id : 48558436406 Question Type : MCQ Option Shuffling : No Is Question Mandatory : No Calculator : None Response Time : N.A Think Time : N.A Minimum Instruction Time : 0

Correct Marks : 5 Wrong Marks : 1

Question Key Details :

Key	Value
Comprehension	MCQ

ହୋମୋଜୋସିଟି କିପରି ହୋଇଥାଏ:

1. ରିକମ୍ବିନାଣ୍ଟ ଡି.ଏନ୍.ଏ. ଟେକ୍ନୋଲୋଜି
2. ବାକସଂକରଣ
3. ଇନ୍‌ବ୍ରିଡିଂ
4. ହାଇବ୍ରିଡୋମା ଟେକ୍ନୋଲୋଜି

Options :

485584145621. 1
485584145622. 2
485584145623. 3
485584145624. 4

Question Number : 22 Question Id : 48558436407 Question Type : MCQ Option Shuffling : No Is Question Mandatory : No Calculator : None Response Time : N.A Think Time : N.A Minimum Instruction Time : 0

Correct Marks : 5 Wrong Marks : 1

Question Key Details :

Key	Value
Comprehension	MCQ

Arrange the steps involved in breeding a crop for a new genetic variety in sequence.

- A. Selection and testing of superior recombinants
- B. Evaluation and selection of parents
- C. Collection of variability
- D. Testing release and commercialisation of new cultivars
- E. Cross hybridisation among selected parents

Choose the correct answer from the options given below:

- 1. A → C → B → E → D
- 2. B → D → A → C → E
- 3. C → B → E → A → D
- 4. D → B → A → E → C

Options :

- 485584145625. 1
- 485584145626. 2
- 485584145627. 3
- 485584145628. 4

Question Number : 22 Question Id : 48558436407 Question Type : MCQ Option Shuffling : No Is Question Mandatory : No Calculator : None Response Time : N.A Think Time : N.A Minimum Instruction Time : 0

Correct Marks : 5 Wrong Marks : 1

Question Key Details :

Key	Value
Comprehension	MCQ

କୌଣସି ଶସ୍ତ୍ରକୁ ନୂଆ ଜେନେଟିକ୍ ଭେରିଏଣ୍ଟି ରେ ବ୍ରଡିଙ୍ଗ କରିବାର ସୋପାନ ଗୁଡିକୁ କ୍ରମରେ ସଜାଡି ରେଖନ୍ତୁ।

- A. ଶ୍ରେଷ୍ଠ ରିକମ୍ବିନାଣ୍ଟର ଉତ୍ତମ ଏବଂ ପରୀକ୍ଷଣ
- B. ପ୍ରାରେଡେଜର ମୂଲ୍ୟାଙ୍କନ ଏବଂ ଚୟନ
- C. ଉପାଦାନଗୁଡ଼ିକର ସଂଗ୍ରହ
- D. Testing release and commercialisation of new cultivars
- E. ଚୟନିତ ପ୍ରାରେଡେଜର ମଧ୍ୟରେ

ନିମ୍ନଲିଖିତ ବିକଳ୍ପ ମଧ୍ୟରୁ ସଠିକ୍ ଉତ୍ତରଟି ବାଛନ୍ତୁ:

- 1. A → C → B → E → D
- 2. B → D → A → C → E
- 3. C → B → E → A → D
- 4. D → B → A → E → C

Options :

- 485584145625. 1
- 485584145626. 2

485584145627. 3

485584145628. 4

Question Number : 23 Question Id : 48558436408 Question Type : MCQ Option Shuffling : No Is Question Mandatory : No Calculator : None Response Time : N.A Think Time : N.A Minimum Instruction Time : 0

Correct Marks : 5 Wrong Marks : 1

Question Key Details :

Key	Value
Comprehension	MCQ

Match List I with List II

LIST I		LIST II	
A.	<i>Apis indica</i>	I.	Dairying
B.	<i>Catla</i>	II.	Poultry
C.	Leghorn	III.	Fisheries
D.	Jersey	IV.	Bee-keeping

Choose the correct answer from the options given below:

1. A-I, B-II, C-III, D-IV
2. A-II, B-I, C-III, D-IV
3. A-IV, B-III, C-II, D-I
4. A-III, B-IV, C-I, D-II

Options :

485584145629. 1

485584145630. 2

485584145631. 3

485584145632. 4

Question Number : 23 Question Id : 48558436408 Question Type : MCQ Option Shuffling : No Is Question Mandatory : No Calculator : None Response Time : N.A Think Time : N.A Minimum Instruction Time : 0

Correct Marks : 5 Wrong Marks : 1

Question Key Details :

Key	Value
Comprehension	MCQ

କିଣ୍ଠ I ଓ କିଣ୍ଠ II ମିଶାନ୍ତୁ

କିଣ୍ଠ I		କିଣ୍ଠ II	
A.	ଆର୍ପିଓ ଚଣିଆ	I.	କେରଳ
B.	କାମରା	II.	ପଲ୍ଲୀ
C.	କେରଳ	III.	ଫିସର
D.	କୃଷି	IV.	ମଧୁମଝି-ପାଲକ

ନିମ୍ନଲିଖିତ ବିକଳ୍ପ ମଧ୍ୟରୁ ଯାହାକି ଠିକ୍ ଉତ୍ତରଟି ବାଛନ୍ତୁ:

1. A-I, B-II, C-III, D-IV
2. A-II, B-I, C-III, D-IV
3. A-IV, B-III, C-II, D-I
4. A-III, B-IV, C-I, D-II

Options :

485584145629. 1
485584145630. 2
485584145631. 3
485584145632. 4

Question Number : 24 Question Id : 48558436409 Question Type : MCQ Option Shuffling : No Is Question Mandatory : No Calculator : None Response Time : N.A Think Time : N.A Minimum Instruction Time : 0

Correct Marks : 5 Wrong Marks : 1

Question Key Details :

Key	Value
Comprehension	MCQ

Which of the following microbe serves as an important biofertiliser in paddy field?

1. Cyanobacteria
2. *Rhizobium*
3. Mycorrhiza
4. *Bacillus thuringiensis*

Options :

485584145633. 1
485584145634. 2
485584145635. 3
485584145636. 4

Question Number : 24 Question Id : 48558436409 Question Type : MCQ Option Shuffling : No Is Question Mandatory : No Calculator : None Response Time : N.A Think Time : N.A Minimum Instruction Time : 0

Correct Marks : 5 Wrong Marks : 1

Question Key Details :

Key	Value
Comprehension	MCQ

ଧାନ ଶେତରେ କେଉଁ ମାଉଜନୋକ ବାୟୋସାର ରୂପେ କାର୍ଯ୍ୟ କରେ?

1. ସ୍ୟାନୋବ୍ୟାକ୍ଟେରିଆ
2. ରାଇଜୋଭିଅମ
3. ମାଇକୋଜିମ
4. ହାସିଲାସ୍ ଥୁରିଲିଫାନସିସ୍

Options :

485584145633. 1
 485584145634. 2
 485584145635. 3
 485584145636. 4

Question Number : 25 Question Id : 48558436410 Question Type : MCQ Option Shuffling : No Is Question Mandatory : No Calculator : None Response Time : N.A Think Time : N.A Minimum Instruction Time : 0

Correct Marks : 5 Wrong Marks : 1

Question Key Details :

Key	Value
Comprehension	MCQ

Identify the correct statements with respect to microbes.

- A. "Toddy" the traditional drink obtained by fermenting sap of Palm tree.
- B. Swiss cheese's large holes are due to activity of *Saccharomyces cerevisiae*.
- C. "Penicillin" was discovered by Alexander Fleming.
- D. The Cyclosporin A, is produced by *Trichoderma polysporum*.

Choose the the correct answer from the options given below:

1. A, B and D only
2. A and B only
3. A, C, and D only
4. C and D only

Options :

485584145637. 1
 485584145638. 2
 485584145639. 3
 485584145640. 4

Question Number : 25 Question Id : 48558436410 Question Type : MCQ Option Shuffling : No Is Question Mandatory : No Calculator : None Response Time : N.A Think Time : N.A Minimum Instruction Time : 0

Correct Marks : 5 Wrong Marks : 1

Question Key Details :

Key	Value
Comprehension	MCQ

ମାଲକୋବ ପାଇଁ ସଠିକ୍ କଥାଟି ହେଲା:

- A. ଚାକରଞ୍ଜ ରସକୁ ପରମେଞ୍ଜ କରି ପାରମ୍ପରିକ ପାଚାଣ "ଗାଡ଼ି" ବନାନ୍ତୁଏ
- B. ସ୍ୱିସ ଚିଜ୍ ରେ ବଡ଼ କଣା ସାଜୁମାଲସେସ ସେରେଜିଆ ର କାର୍ଯ୍ୟରୁ ହୁଏ
- C. ଆଲେକଜାଣ୍ଡର ଫ୍ଲେମିଂ "ପେନସିଲିନ" ଉଦ୍ଭାବନ କଲେ
- D. ସାଲମୋନେଲିନ A, ଗ୍ରାଉଜୋଜର୍ମା ପଲିକରମ ଦ୍ୱାରା ସୃଷ୍ଟ

ନିମ୍ନଲିଖିତ ବିକଳ୍ପ ମଧ୍ୟରୁ ସଠିକ୍ ଉତ୍ତରଟି ବାଛନ୍ତୁ:

- 1. କେବଳ A, B ଏବଂ D
- 2. କେବଳ A ଏବଂ B
- 3. କେବଳ A, C, ଏବଂ D
- 4. କେବଳ C ଏବଂ D

Options :

- 485584145637. 1
- 485584145638. 2
- 485584145639. 3
- 485584145640. 4

Question Number : 26 Question Id : 48558436411 Question Type : MCQ Option Shuffling : No Is Question Mandatory : No Calculator : None Response Time : N.A Think Time : N.A Minimum Instruction Time : 0

Correct Marks : 5 Wrong Marks : 1

Question Key Details :

Key	Value
Comprehension	MCQ

Match List I with List II

LIST I Organism		LIST II Product	
A.	<i>Streptococcus</i>	I.	Citric acid
B.	<i>Aspergillus niger</i>	II.	Streptokinase
C.	<i>Monascus purpureus</i>	III.	Ethanol
D.	<i>Saccharomyces cerevisiae</i>	IV.	Statin

Choose the correct answer from the options given below:

- 1. A-II, B-I, C-IV, D-III
- 2. A-I, B-II, C-III, D-IV
- 3. A-II, B-I, C-III, D-IV
- 4. A-III, B-IV, C-I, D-II

Options :

- 485584145641. 1
- 485584145642. 2
- 485584145643. 3
- 485584145644. 4

Question Number : 26 Question Id : 48558436411 Question Type : MCQ Option Shuffling : No Is Question Mandatory : No Calculator : None Response Time : N.A Think Time : N.A Minimum Instruction Time : 0

Correct Marks : 5 Wrong Marks : 1

Question Key Details :

Key	Value
Comprehension	MCQ

କିଣ୍ଠ I ସହ କିଣ୍ଠ II ମିଶାନ୍ତୁ

କିଣ୍ଠ I		କିଣ୍ଠ II	
A.	ଶ୍ରେୟୋଦୟ	I.	ସାରଳିକ ଏସିଡ (ଅମ୍ଳ)
B.	ଏକକକିରଣ ନିରାକର	II.	ଶ୍ରେୟୋଦାନନାକ
C.	ମୋନୋକ୍ଷୟ ପରପରୋକ୍ଷ	III.	ଉତ୍ପାଦନ
D.	ସାଧାରଣମାନସେଷ କେରୋମିନିଆ	IV.	ଝାଡ଼ିର

ନିମ୍ନକିଣ୍ଠ ବିକଳ ମଧ୍ୟରୁ ସଠିକ୍ ଉତ୍ତରଟି ବାଛନ୍ତୁ:

- 1. A-II, B-I, C-IV, D-III
- 2. A-I, B-II, C-III, D-IV
- 3. A-II, B-I, C-III, D-IV
- 4. A-III, B-IV, C-I, D-II

Options :

- 485584145641. 1
- 485584145642. 2
- 485584145643. 3
- 485584145644. 4

Question Number : 27 Question Id : 48558436412 Question Type : MCQ Option Shuffling : No Is Question Mandatory : No Calculator : None Response Time : N.A Think Time : N.A Minimum Instruction Time : 0

Correct Marks : 5 Wrong Marks : 1

Question Key Details :

Key	Value
Comprehension	MCQ

Which of the following is not a part of downstream processing?

1. Separation
2. Purification
3. Quality control
4. Biosynthesis

Options :

485584145645. 1
485584145646. 2
485584145647. 3
485584145648. 4

Question Number : 27 Question Id : 48558436412 Question Type : MCQ Option Shuffling : No Is Question Mandatory : No Calculator : None Response Time : N.A Think Time : N.A Minimum Instruction Time : 0

Correct Marks : 5 Wrong Marks : 1

Question Key Details :

Key	Value
Comprehension	MCQ

କେଉଁଟି ତାତକାଳୀନ ପ୍ରୋସେସିଂର ଅଂଗ ନୁହେଁ:

1. ସେପାରେସନ (ପୃଥକୀକରଣ)
2. ପ୍ୟୁରିଫିକେସନ (ବିଷୁଦ୍ଧିକରଣ)
3. କ୍ୱାଲିଟି ନିୟନ୍ତ୍ରଣ (ବୃତ୍ତାନ୍ତର ନିୟନ୍ତ୍ରଣ)
4. ବାୟୋସିନ୍ଥେସିସ

Options :

485584145645. 1
485584145646. 2
485584145647. 3
485584145648. 4

Question Number : 28 Question Id : 48558436413 Question Type : MCQ Option Shuffling : No Is Question Mandatory : No Calculator : None Response Time : N.A Think Time : N.A Minimum Instruction Time : 0

Correct Marks : 5 Wrong Marks : 1

Question Key Details :

Key	Value
Comprehension	MCQ

Which was the first restriction endonuclease discovered?

1. *EcoRI*
2. *BamHI*
3. *Hind II*
4. *Pst I*

Options :

485584145649. 1
485584145650. 2
485584145651. 3
485584145652. 4

Question Number : 28 Question Id : 48558436413 Question Type : MCQ Option Shuffling : No Is Question Mandatory : No Calculator : None Response Time : N.A Think Time : N.A Minimum Instruction Time : 0

Correct Marks : 5 Wrong Marks : 1

Question Key Details :

Key	Value
Comprehension	MCQ

ପ୍ରଥମ ଉଦ୍ଭାବିତ ରୋକିଆମକାରୀ ଏଣ୍ଡୋନ୍ୟୁକ୍ଲିଜ୍ ଝେରା:

1. *EcoRI*
2. *BamHI*
3. *Hind II*
4. *Pst I*

Options :

485584145649. 1
485584145650. 2
485584145651. 3
485584145652. 4

Question Number : 29 Question Id : 48558436414 Question Type : MCQ Option Shuffling : No Is Question Mandatory : No Calculator : None Response Time : N.A Think Time : N.A Minimum Instruction Time : 0

Correct Marks : 5 Wrong Marks : 1

Question Key Details :

Key	Value
Comprehension	MCQ

The correct sequence of steps to obtain gene of interest from pool of DNA is:

- A. Cutting of DNA using restriction endonuclease.
- B. Viewing the ethidium bromide stained gel under UV light.
- C. Loading of DNA in wells.
- D. Cutting and extraction of DNA piece from gel.
- E. Separation of DNA fragments according to their molecular size.

Choose the correct answer from the options given below:

- 1. A, C, E, B, D
- 2. A, D, C, B, E
- 3. E, D, B, C, A
- 4. D, E, C, A, B

Options :

- 485584145653. 1
- 485584145654. 2
- 485584145655. 3
- 485584145656. 4

Question Number : 29 Question Id : 48558436414 Question Type : MCQ Option Shuffling : No Is Question Mandatory : No Calculator : None Response Time : N.A Think Time : N.A Minimum Instruction Time : 0

Correct Marks : 5 Wrong Marks : 1

Question Key Details :

Key	Value
Comprehension	MCQ

DNA ପୁଲରୁ ଆଗ୍ରସ୍ତ ଥିବା ଜିନ ପାଇବାର କ୍ରମ ସମ୍ପନ୍ନ:

- A. DNA କୁ ରୋକପାମକାରୀ ଏଣ୍ଡୋନ୍ୟୁକ୍ଲିଜ ଦ୍ୱାରା କାଟିବା
- B. UV ଆଲୋକରେ ଏଣ୍ଡିୟମ ଟ୍ରୋମାଉଡ ଜେଲ କୁ ଦେଖିବା
- C. DNA ସ୍ପଟ୍ଟିକୁ ବୁର୍ସରେ ଚମେଇବା
- D. ଜେଲରୁ DNA ପିସ କାଟିବା ତଥା କାଢିବା
- E. DNA ଅଂଶବିଶେଷକୁ ସେମାନଙ୍କ ଆଣବିକ ଆକାର ଅନୁସାରେ ଧରଣା ଭରିବା

ନିମ୍ନଲିଖିତ ବିକଳ୍ପ ମଧ୍ୟରୁ ସଠିକ୍ ଉତ୍ତରଟି ବାଛନ୍ତୁ:

- 1. A, C, E, B, D
- 2. A, D, C, B, E
- 3. E, D, B, C, A
- 4. D, E, C, A, B

Options :

- 485584145653. 1
- 485584145654. 2

485584145655. 3

485584145656. 4

Question Number : 30 Question Id : 48558436415 Question Type : MCQ Option Shuffling : No Is Question Mandatory : No Calculator : None Response Time : N.A Think Time : N.A Minimum Instruction Time : 0

Correct Marks : 5 Wrong Marks : 1

Question Key Details :

Key	Value
Comprehension	MCQ

Over 95% of all existing transgenic animals are:

1. Mice
2. Goat
3. Rabbit
4. Pig

Options :

485584145657. 1

485584145658. 2

485584145659. 3

485584145660. 4

Question Number : 30 Question Id : 48558436415 Question Type : MCQ Option Shuffling : No Is Question Mandatory : No Calculator : None Response Time : N.A Think Time : N.A Minimum Instruction Time : 0

Correct Marks : 5 Wrong Marks : 1

Question Key Details :

Key	Value
Comprehension	MCQ

କର୍ତ୍ତୃତ୍ୱ 95% ରୁ ଅଧିକ ପ୍ରାକୃତଗୋଳିକ ପଶୁ ଶେକେ:

1. ମୂଷା
2. ଶେକି
3. ଚଠକୁଆ
4. ଗୁରୁଗୀ

Options :

485584145657. 1

485584145658. 2

485584145659. 3

485584145660. 4

Question Number : 31 Question Id : 48558436416 Question Type : MCQ Option Shuffling : No Is Question Mandatory : No Calculator : None Response Time : N.A Think Time : N.A Minimum Instruction Time : 0

Correct Marks : 5 Wrong Marks : 1

Question Key Details :

Key	Value
Comprehension	MCQ

A novel strategy to prevent infestation of roots of tobacco plant with the nematode *Meloidogyne incognitia* is :

1. DNA interference
2. DNA-RNA interference
3. RNA interference
4. RNA-Protein interference

Options :

485584145661. 1
485584145662. 2
485584145663. 3
485584145664. 4

Question Number : 31 Question Id : 48558436416 Question Type : MCQ Option Shuffling : No Is Question Mandatory : No Calculator : None Response Time : N.A Think Time : N.A Minimum Instruction Time : 0

Correct Marks : 5 Wrong Marks : 1

Question Key Details :

Key	Value
Comprehension	MCQ

ଶୋଭାକୋ ଗଛର ଚେରକୁ ନେମାଟୋଡ ମେଲୋଇଡେଟିନ କନଜଗାନ୍ଧିଆ ଦ୍ୱାରା ଆକ୍ରାନ୍ତ ହେବାରୁ ବ୍ୟବସାୟର ଅନନ୍ୟ ଉପାୟ ହେଲା:

1. DNA ବ୍ୟତିକ୍ରମ
2. DNA-RNA ବ୍ୟତିକ୍ରମ
3. RNA ବ୍ୟତିକ୍ରମ
4. RNA-ପ୍ରୋଟିନ ବ୍ୟତିକ୍ରମ

Options :

485584145661. 1
485584145662. 2
485584145663. 3
485584145664. 4

Question Number : 32 Question Id : 48558436417 Question Type : MCQ Option Shuffling : No Is Question Mandatory : No Calculator : None Response Time : N.A Think Time : N.A Minimum Instruction Time : 0

Correct Marks : 5 Wrong Marks : 1

Question Key Details :

Key	Value
Comprehension	MCQ

Match List I with List II

LIST I		LIST II	
A.	<i>Bacillus thuringiensis</i>	I.	Synthetic Human Insulin
B.	<i>Agrobacterium</i>	II.	ADA gene therapy
C.	<i>E. Coli</i>	III.	Cry gene
D.	Retroviral Vector	IV.	Vector carrying nematode-specific genes

Choose the correct answer from the options given below:

1. A-III, B-IV, C-I, D-II
2. A-II, B-I, C-III, D-IV
3. A-I, B-III, C-IV, D-II
4. A-IV, B-II, C-I, D-III

Options :

485584145665. 1
 485584145666. 2
 485584145667. 3
 485584145668. 4

Question Number : 32 Question Id : 48558436417 Question Type : MCQ Option Shuffling : No Is Question Mandatory : No Calculator : None Response Time : N.A Think Time : N.A Minimum Instruction Time : 0

Correct Marks : 5 Wrong Marks : 1

Question Key Details :

Key	Value
Comprehension	MCQ

ଲିଷ୍ଟ I ସହ ଲିଷ୍ଟ II ମିଶାନ୍ତୁ

ଲିଷ୍ଟ I		ଲିଷ୍ଟ II	
A.	ବାସିଲସ୍ ଥୁରିଂଜିଂସିସ୍	I.	ସିନ୍ଥେଟିକ୍ ମାନବ ଇନ୍ସୁଲିନ୍
B.	ଆଗ୍ରୋବାକ୍ଟେରିୟମ୍	II.	ADA ଜିନ୍ ଉପଚାର
C.	<i>E. କୋଲି</i>	III.	Cry ଜିନ୍
D.	ରେଟ୍ରୋଭାଇରାଲ ଭେକ୍ଟର	IV.	ନେମାଟୋଡ-କେସିଟିଭ୍-ଜିନ୍ ବହନ କରୁଥିବା ଭେକ୍ଟର

ନିମ୍ନଲିଖିତ ବିକଳ୍ପ ମଧ୍ୟରୁ ସଠିକ୍ ଉତ୍ତରଟି ଚାହନ୍ତୁ:

1. A-III, B-IV, C-I, D-II
2. A-II, B-I, C-III, D-IV
3. A-I, B-III, C-IV, D-II
4. A-IV, B-II, C-I, D-III

Options :

- 485584145665. 1
- 485584145666. 2
- 485584145667. 3
- 485584145668. 4

Question Number : 33 Question Id : 48558436418 Question Type : MCQ Option Shuffling : No Is Question Mandatory : No Calculator : None Response Time : N.A Think Time : N.A Minimum Instruction Time : 0

Correct Marks : 5 Wrong Marks : 1

Question Key Details :

Key	Value
Comprehension	MCQ

Identify the commensalism from the following associations:

- 1. Fungi and roots of higher plants.
- 2. Cuckoo and crow during breeding season
- 3. Fig species and wasp
- 4. Sea anemone and clown fish

Options :

- 485584145669. 1
- 485584145670. 2
- 485584145671. 3
- 485584145672. 4

Question Number : 33 Question Id : 48558436418 Question Type : MCQ Option Shuffling : No Is Question Mandatory : No Calculator : None Response Time : N.A Think Time : N.A Minimum Instruction Time : 0

Correct Marks : 5 Wrong Marks : 1

Question Key Details :

Key	Value
Comprehension	MCQ

ନିମ୍ନୋକ୍ତରୁ ଜନେନସାହିତ୍ୟ ଶୋଧକୁ:

- 1. ଫଙ୍ଗି ଏବଂ ଉଚ୍ଚ ବୃକ୍ଷର ଉପର
- 2. କୋକି ଏବଂ କୁଆ ବ୍ରୁଡିଂ (ବଂଶ ବିସ୍ତାର) ବେଳେ
- 3. ଫିଗ (ଫିଗି) ଶ୍ଵେତ ଏବଂ ବିକ୍ଷୁତି
- 4. ସମୁଦ୍ର ଆନେମୋନ ଏବଂ କ୍ଲୋନ ଫିସ

Options :

- 485584145669. 1
- 485584145670. 2
- 485584145671. 3
- 485584145672. 4

Question Number : 34 Question Id : 48558436419 Question Type : MCQ Option Shuffling : No Is Question Mandatory : No Calculator : None Response Time : N.A Think Time : N.A Minimum Instruction Time : 0

Correct Marks : 5 Wrong Marks : 1

Question Key Details :

Key	Value
Comprehension	MCQ

Select the organisms that can tolerate wide range of temperatures:

1. Eurythermals
2. Stenothermals
3. Conformers
4. Osmoregulators

Options :

- 485584145673. 1
- 485584145674. 2
- 485584145675. 3
- 485584145676. 4

Question Number : 34 Question Id : 48558436419 Question Type : MCQ Option Shuffling : No Is Question Mandatory : No Calculator : None Response Time : N.A Think Time : N.A Minimum Instruction Time : 0

Correct Marks : 5 Wrong Marks : 1

Question Key Details :

Key	Value
Comprehension	MCQ

କେଉଁ ଜୀବଙ୍କ ସର୍ବାଧିକ ତାପମାତ୍ରା ରେଞ୍ଜ ସହ୍ୟ:

1. ୟୁରିଥର୍ମାଲସ
2. ଷ୍ଟେନୋଥର୍ମାଲସ
3. କନଫର୍ମରସ
4. ଅସ୍ମୋରେଗୁଲେଟର୍ସ

Options :

- 485584145673. 1
- 485584145674. 2
- 485584145675. 3
- 485584145676. 4

Question Number : 35 Question Id : 48558436420 Question Type : MCQ Option Shuffling : No Is Question Mandatory : No Calculator : None Response Time : N.A Think Time : N.A Minimum Instruction Time : 0

Correct Marks : 5 Wrong Marks : 1

Question Key Details :

Key	Value
Comprehension	MCQ

The rate of decomposition is controlled by:

1. Chemical composition of detritus only
2. Climatic factors only
3. Both chemical composition of detritus and climatic factors
4. Atmospheric pressure

Options :

485584145677. 1
485584145678. 2
485584145679. 3
485584145680. 4

Question Number : 35 Question Id : 48558436420 Question Type : MCQ Option Shuffling : No Is Question Mandatory : No Calculator : None Response Time : N.A Think Time : N.A Minimum Instruction Time : 0

Correct Marks : 5 Wrong Marks : 1

Question Key Details :

Key	Value
Comprehension	MCQ

କ୍ଷୟ ହାର ନିୟନ୍ତ୍ରିତ ହୁଏ:

1. କେବଳ ତେଜସ୍ବର ରାସାୟନିକ ବିନ୍ୟାସ ଦ୍ବାରା
2. କେବଳ ପାରିପାଶ୍ବ ପର୍ଯ୍ୟାୟର ଦ୍ବାରା
3. ଉଭୟ (1) ଏବଂ (2)
4. ବାୟୁମଣ୍ଡଳର ଚାପ

Options :

485584145677. 1
485584145678. 2
485584145679. 3
485584145680. 4

Question Number : 36 Question Id : 48558436421 Question Type : MCQ Option Shuffling : No Is Question Mandatory : No Calculator : None Response Time : N.A Think Time : N.A Minimum Instruction Time : 0

Correct Marks : 5 Wrong Marks : 1

Question Key Details :

Key	Value
Comprehension	MCQ

The Net Primary Productivity (NPP) is :

1. Gross Primary Productivity – Respiration losses
2. Gross Primary Productivity + Respiration losses
3. Gross Primary Productivity × Respiration losses
4. Respiration losses – Gross Primary Productivity

Options :

485584145681. 1
485584145682. 2
485584145683. 3
485584145684. 4

Question Number : 36 Question Id : 48558436421 Question Type : MCQ Option Shuffling : No Is Question Mandatory : No Calculator : None Response Time : N.A Think Time : N.A Minimum Instruction Time : 0

Correct Marks : 5 Wrong Marks : 1

Question Key Details :

Key	Value
Comprehension	MCQ

ନେଟ୍ ପ୍ରାଥମିକ ଉତ୍ପାଦନ (NPP) ହେଉଛି :

1. ଗ୍ରହ ପ୍ରାଥମିକ ଉତ୍ପାଦନ – ଚ୍ଳେଷଣ (ଶ୍ୱସନ) କ୍ଷୟ
2. ଗ୍ରହ ପ୍ରାଥମିକ ଉତ୍ପାଦନ + ଚ୍ଳେଷଣ (ଶ୍ୱସନ) କ୍ଷୟ
3. ଗ୍ରହ ପ୍ରାଥମିକ ଉତ୍ପାଦନ × ଚ୍ଳେଷଣ (ଶ୍ୱସନ) କ୍ଷୟ
4. ଚ୍ଳେଷଣ କ୍ଷୟ – ଗ୍ରହ ପ୍ରାଥମିକ ଉତ୍ପାଦନ

Options :

485584145681. 1
485584145682. 2
485584145683. 3
485584145684. 4

Question Number : 37 Question Id : 48558436422 Question Type : MCQ Option Shuffling : No Is Question Mandatory : No Calculator : None Response Time : N.A Think Time : N.A Minimum Instruction Time : 0

Correct Marks : 5 Wrong Marks : 1

Question Key Details :

Key	Value
Comprehension	MCQ

Which of the following country has the highest biodiversity?

1. Brazil
2. Zimbabwe
3. Russia
4. India

Options :

485584145685. 1
485584145686. 2
485584145687. 3
485584145688. 4

Question Number : 37 Question Id : 48558436422 Question Type : MCQ Option Shuffling : No Is Question Mandatory : No Calculator : None Response Time : N.A Think Time : N.A Minimum Instruction Time : 0

Correct Marks : 5 Wrong Marks : 1

Question Key Details :

Key	Value
Comprehension	MCQ

କେଉଁ ଦେଶରେ ସର୍ବାଧିକ ବାୟୋଡାଇଭର୍ସିଟି (ଜୀବଜଗତ-ବିବିଧତା) ଅଛି:

1. ବ୍ରାଜିଲ
2. ଜିମ୍ବାୱେ
3. ରୁଷିଆ
4. ଭାରତ

Options :

485584145685. 1
485584145686. 2
485584145687. 3
485584145688. 4

Question Number : 38 Question Id : 48558436423 Question Type : MCQ Option Shuffling : No Is Question Mandatory : No Calculator : None Response Time : N.A Think Time : N.A Minimum Instruction Time : 0

Correct Marks : 5 Wrong Marks : 1

Question Key Details :

Key	Value
Comprehension	MCQ

Which of the following species has become extinct due to over exploitation by humans?

1. *Clarias gariepinus*
2. Stellers's sea cow
3. *Lantana*
4. *Parthenium*

Options :

485584145689. 1
485584145690. 2
485584145691. 3
485584145692. 4

Question Number : 38 Question Id : 48558436423 Question Type : MCQ Option Shuffling : No Is Question Mandatory : No Calculator : None Response Time : N.A Think Time : N.A Minimum Instruction Time : 0

Correct Marks : 5 Wrong Marks : 1

Question Key Details :

Key	Value
Comprehension	MCQ

ନିମ୍ନୋକ୍ତ କିଏ ମଣିଷର ଅତ୍ୟଧିକ ବ୍ୟବହାର ଯୋଗୁଁ ବିଲୁପ୍ତ ହୋଇଗଲା?

1. କ୍ଲାରୀସ ଗାରିପିନସ
2. ଷ୍ଟେଲରସ ସମୁଦ୍ର ଗାଈ
3. ଲାଣ୍ଟାନା
4. ପାର୍ଥେନିଅମ

Options :

485584145689. 1
485584145690. 2
485584145691. 3
485584145692. 4

Question Number : 39 Question Id : 48558436424 Question Type : MCQ Option Shuffling : No Is Question Mandatory : No Calculator : None Response Time : N.A Think Time : N.A Minimum Instruction Time : 0

Correct Marks : 5 Wrong Marks : 1

Question Key Details :

Key	Value
Comprehension	MCQ

Salts are drawn to the surface of the soil by:

1. Over cultivation
2. Deforestation
3. Water logging
4. Unrestricted grazing

Options :

485584145693. 1
485584145694. 2
485584145695. 3
485584145696. 4

Question Number : 39 Question Id : 48558436424 Question Type : MCQ Option Shuffling : No Is Question Mandatory : No Calculator : None Response Time : N.A Think Time : N.A Minimum Instruction Time : 0

Correct Marks : 5 Wrong Marks : 1

Question Key Details :

Key	Value
Comprehension	MCQ

ନୂତନୀୟ ପୁସ୍ତକ ନୁହେଁ ସବୁ ଚାଣି ହୁଏ:

1. ଅତ୍ୟଧିକ ଚାଷ ହେବା
2. ଜଙ୍ଗଲ କ୍ଷୟ ହେବା
3. ଜଳ ଜମିବା ହେବା
4. ଅନିୟନ୍ତ୍ରିତ ଗାଈ ଚରା ହେବା

Options :

485584145693. 1
485584145694. 2
485584145695. 3
485584145696. 4

Question Number : 40 Question Id : 48558436425 Question Type : MCQ Option Shuffling : No Is Question Mandatory : No Calculator : None Response Time : N.A Think Time : N.A Minimum Instruction Time : 0

Correct Marks : 5 Wrong Marks : 1

Question Key Details :

Key	Value
Comprehension	MCQ

World's most problematic aquatic weed is:

1. Free floating algae
2. *Vallisneria*
3. *Eichhornia crassipes*
4. *Chara*

Options :

485584145697. 1
485584145698. 2
485584145699. 3
485584145700. 4

Question Number : 40 Question Id : 48558436425 Question Type : MCQ Option Shuffling : No Is Question Mandatory : No Calculator : None Response Time : N.A Think Time : N.A Minimum Instruction Time : 0

Correct Marks : 5 Wrong Marks : 1

Question Key Details :

Key	Value
Comprehension	MCQ

ନିମ୍ନର ସବୁଠୁ ଅସୁବିଧା ସୃଷ୍ଟିକାରୀ ଜଳଜ ଔଷ୍ଣ (ଅନାବନା ଘାସ) ଝେଲା:

1. ଫ୍ରି ଫ୍ଲୋଟିଂ ଆଲଗି
2. ଭଲିସନେରିଆ
3. ଆଇକହର୍ନିଆ କ୍ରାସିପେସ
4. ଚାରା

Options :

485584145697. 1
485584145698. 2
485584145699. 3
485584145700. 4

Sub-Section Number :

2

Sub-Section Id :

4855842691

Question Shuffling Allowed :

No

Is Section Default? :

null

Question Number : 41 Question Id : 48558436426 Question Type : MCQ Option Shuffling : No Is Question Mandatory : No Calculator : None Response Time : N.A Think Time : N.A Minimum Instruction Time : 0

Correct Marks : 5 Wrong Marks : 1

Question Key Details :

Key	Value
Comprehension	Comp1

Read the given paragraph and answer the question:

Humans have 23 pairs of chromosomes. 22 pairs are exactly same in both males and females; these are the autosomes. A pair of X-chromosome are present in the female, whereas the presence of an X and Y chromosome are determinant of the male characteristic.

A number of disorders in human beings have been found to be associated with the inheritance of changed or altered genes or chromosomes. Broadly, genetic disorder may be grouped into two categories-Mendelian disorders and Chromosomal disorders.

What is the probability of having a daughter to a couple expecting their first child?

1. Nil
2. 25%
3. 50%
4. 100%

Options :

485584145701. 1
485584145702. 2
485584145703. 3
485584145704. 4

Question Number : 41 Question Id : 48558436426 Question Type : MCQ Option Shuffling : No Is Question Mandatory : No Calculator : None Response Time : N.A Think Time : N.A Minimum Instruction Time : 0

Correct Marks : 5 Wrong Marks : 1

Question Key Details :

Key	Value
Comprehension	Comp1

ପାଠାଗ୍ରାଣ ପଢ଼ି Q. 41-45 ର ଉତ୍ତର ଦିଅନ୍ତୁ।

ମଣିଷ ମାନବର 23 ଯୋଡ଼ା କ୍ରୋମୋଜମ ରହିଛି। 22 ଯୋଡ଼ା ନାରୀପୁରୁଷ ଚାର୍ଜ ସମାନ; ଏମାନେ ଅଟୋଜମ୍। X କ୍ରୋମୋଜମ ର ଏକ ଯୋଡ଼ା ନାରୀଙ୍କଠାରେ ରହିଛି। ଯେତେବେଳେ X, Y କ୍ରୋମୋଜମର ଅବସ୍ଥିତି ପୁରୁଷ ଶୁଣର ପରିଗଣୟକ।

ମଣିଷ ମଧ୍ୟରେ ଦେଖାଯାଉଥିବା ଅନେକଗୁଡ଼ିଏ ଡିସଅର୍ଡର ଏହି ଜିନିଷ ପରିବର୍ତ୍ତନ କିମ୍ବା ବଦଳରୁ ଜାତ। ମୁଖ୍ୟତଃ ଜେନେଟିକ ଡିସଅର୍ଡର ଦୁଇ ପ୍ରକାରର - ମେଣ୍ଡେଲିଆନ ଏବଂ କ୍ରୋମୋଜମ ଜନିତ।

ଏକ ବ୍ୟକ୍ତିକ ପ୍ରଥମ ସନ୍ତାନ ବିଧି ସେବାର ସମ୍ଭାବ୍ୟତା ହେଉଛି?

1. ଶୂନ୍ୟ
2. 25%
3. 50%
4. 100%

Options :

485584145701. 1
485584145702. 2
485584145703. 3
485584145704. 4

Question Number : 42 Question Id : 48558436427 Question Type : MCQ Option Shuffling : No Is Question Mandatory : No Calculator : None Response Time : N.A Think Time : N.A Minimum Instruction Time : 0

Correct Marks : 5 Wrong Marks : 1

Question Key Details :

Key	Value
Comprehension	Comp1

Read the given paragraph and answer the question:

Humans have 23 pairs of chromosomes. 22 pairs are exactly same in both males and females; these are the autosomes. A pair of X-chromosome are present in the female, whereas the presence of an X and Y chromosome are determinant of the male characteristic.

A number of disorders in human beings have been found to be associated with the inheritance of changed or altered genes or chromosomes. Broadly, genetic disorder may be grouped into two categories-Mendelian disorders and Chromosomal disorders.

A disorder caused due to absence of one of the 'X' chromosome is -

1. Turner's Syndrome
2. Down's Syndrome
3. Klinefelter's Syndrome
4. Thalassemia

Options :

485584145705. 1
485584145706. 2
485584145707. 3
485584145708. 4

Question Number : 42 Question Id : 48558436427 Question Type : MCQ Option Shuffling : No Is Question Mandatory : No Calculator : None Response Time : N.A Think Time : N.A Minimum Instruction Time : 0

Correct Marks : 5 Wrong Marks : 1

Question Key Details :

Key	Value
Comprehension	Comp1

ପାଠାଗ୍ରାହୀ ପଢ଼ି Q. 41-45 ର ଉତ୍ତର ଦିଅନ୍ତୁ।

ମଣିଷ ମାନବର 23 ଯୋଡ଼ା କ୍ରୋମୋଜମ ରହିଛି। 22 ଯୋଡ଼ା ନାରୀପୁରୁଷ ଯାକ ସମାନ; ଏମାନେ ଅଟୋଜମ୍। X କ୍ରୋମୋଜମ ର ଏକ ଯୋଡ଼ା ନାରୀଙ୍କଠାରେ ରହିଛି। ଯେତେବେଳେ X, Y କ୍ରୋମୋଜମର ଅବସ୍ଥିତି ପୁରୁଷ ବୁଣର ପରିଚାୟକ।

ମଣିଷ ମଧ୍ୟରେ ଦେଖାଯାଉଥିବା ଅନେକଗୁଡ଼ିଏ ଚିଷ୍ଟଅର୍ଚ୍ଚନ ଏହି ଜିନିଷ ପରିବର୍ତ୍ତନ କିମ୍ବା ବଦଳରୁ ଜାତ। ମୁଖ୍ୟତଃ ଜେନେଟିକ ଚିଷ୍ଟଅର୍ଚ୍ଚନ ଦୁଇ ପ୍ରକାରର - ମେଣ୍ଡେଲିଆନ ଏବଂ କ୍ରୋମୋଜମ ଜନିତ।

ଏକ 'X' କ୍ରୋମୋଜମ ଅଭାବରେ ସୃଷ୍ଟ ଚିଷ୍ଟଅର୍ଚ୍ଚନ ହେଲା:

1. ଚର୍ମର ସିଣ୍ଡ୍ରୋମ
2. ହାତର ସିଣ୍ଡ୍ରୋମ
3. କାକର ଯେଜୁର ସିଣ୍ଡ୍ରୋମ
4. ଥାଇସିନିଆ

Options :

485584145705. 1
 485584145706. 2
 485584145707. 3
 485584145708. 4

Question Number : 43 Question Id : 48558436428 Question Type : MCQ Option Shuffling : No Is Question Mandatory : No Calculator : None Response Time : N.A Think Time : N.A Minimum Instruction Time : 0

Correct Marks : 5 Wrong Marks : 1

Question Key Details :

Key	Value
Comprehension	Comp1

Read the given paragraph and answer the question:

Humans have 23 pairs of chromosomes. 22 pairs are exactly same in both males and females; these are the autosomes. A pair of X-chromosome are present in the female, whereas the presence of an X and Y chromosome are determinant of the male characteristic.

A number of disorders in human beings have been found to be associated with the inheritance of changed or altered genes or chromosomes. Broadly, genetic disorder may be grouped into two categories-Mendelian disorders and Chromosomal disorders.

A haemophilic man marries a normal woman. What is the possibility that their child have haemophilia?

1. 75%
2. 25%
3. 0%
4. 50%

Options :

485584145709. 1
485584145710. 2
485584145711. 3
485584145712. 4

Question Number : 43 Question Id : 48558436428 Question Type : MCQ Option Shuffling : No Is Question Mandatory : No Calculator : None Response Time : N.A Think Time : N.A Minimum Instruction Time : 0

Correct Marks : 5 Wrong Marks : 1

Question Key Details :

Key	Value
Comprehension	Comp1

ପାଠାଗ୍ରାହ ପଢ଼ି Q. 41-45 ର ଉତ୍ତର ଦିଅନ୍ତୁ।

ମଣିଷ ମାନବର 23 ଯୋଡ଼ା କ୍ରୋମୋଜମ ରହିଛି। 22 ଯୋଡ଼ା ନାରୀପୁରୁଷ ପାଇଁ ସମାନ; ଏମାନେ ଅଟୋଜମ୍। X କ୍ରୋମୋଜମ ର ଏକ ଯୋଡ଼ା ନାରୀଙ୍କଠାରେ ରହିଛି। ଯେତେବେଳେ X, Y କ୍ରୋମୋଜମର ଅବସ୍ଥିତି ପୁରୁଷ ସୁଶର ପରିଗଣକ।

ମଣିଷ ମଧ୍ୟରେ ଦେଖାଯାଉଥିବା ଅନେକଗୁଡ଼ିଏ ଚିଷ୍ଟଅର୍ଥର ଏହି ଜିନିଷ ପରିବର୍ତ୍ତନ କିମ୍ବା ବଦଳରୁ ନାତ। ପୁଷ୍ଟିତା ଲେନେଟିବ ଚିଷ୍ଟଅର୍ଥର ଦୁଇ ପ୍ରକାରର - ମେଣ୍ଡେଲିଆର ଏକ କ୍ରୋମୋଜମ କନିତ।

ଏକ ସ୍ତ୍ରୀମୋଚିନିକ ପୁରୁଷ ସାଧାରଣ ସ୍ତ୍ରୀ କୁ ବିବାହ କଲା। ତାଙ୍କ ଶିଶୁ କୁ ସ୍ତ୍ରୀମୋଚିନିଆ ହେବାର ସମ୍ଭାବ୍ୟତା କେତେ:

1. 75%
2. 25%
3. 0%
4. 50%

Options :

485584145709. 1
485584145710. 2
485584145711. 3
485584145712. 4

Question Number : 44 Question Id : 48558436429 Question Type : MCQ Option Shuffling : No Is Question Mandatory : No Calculator : None Response Time : N.A Think Time : N.A Minimum Instruction Time : 0

Correct Marks : 5 Wrong Marks : 1

Question Key Details :

Key	Value
Comprehension	Comp1

Read the given paragraph and answer the question:

Humans have 23 pairs of chromosomes. 22 pairs are exactly same in both males and females; these are the autosomes. A pair of X-chromosome are present in the female, whereas the presence of an X and Y chromosome are determinant of the male characteristic.

A number of disorders in human beings have been found to be associated with the inheritance of changed or altered genes or chromosomes. Broadly, genetic disorder may be grouped into two categories-Mendelian disorders and Chromosomal disorders.

Which of the following is an example of a sex linked disease?

1. Ascariasis
2. Colour blindness
3. Thalassemia
4. Phenylketonuria

Options :

485584145713. 1
485584145714. 2
485584145715. 3
485584145716. 4

Question Number : 44 Question Id : 48558436429 Question Type : MCQ Option Shuffling : No Is Question Mandatory : No Calculator : None Response Time : N.A Think Time : N.A Minimum Instruction Time : 0

Correct Marks : 5 Wrong Marks : 1

Question Key Details :

Key	Value
Comprehension	Comp1

ପାଠଗ୍ରାହୀ ପଢ଼ି Q. 41-45 ର ଉତ୍ତର ଦିଅନ୍ତୁ।

ମଣିଷ ମାନବର 23 ଯୋଡ଼ା କ୍ରୋମୋଜମ ରହିଛି। 22 ଯୋଡ଼ା ନାରୀପୁରୁଷ ପାଇଁ ସମାନ; ଏମାନେ ଅଟୋଜମ। X କ୍ରୋମୋଜମ ର ଏକ ଯୋଡ଼ା ନାରୀମାନଙ୍କରେ ରହିଛି। ଯେତେବେଳେ X, Y କ୍ରୋମୋଜମର ଅବସ୍ଥିତି ପୁରୁଷ ବୃଣର ପରିଚାୟକ।

ମଣିଷ ମଧ୍ୟରେ ଦେଖାଯାଉଥିବା ଅନେକଗୁଡ଼ିଏ ଚିତ୍ତଅର୍ଥର ଏହି ଭିନ୍ନ ପରିବର୍ତ୍ତନ କିମ୍ବା ବଦଳରୁ ଜାତ। ମୁଖ୍ୟତଃ ଭେନେଟିବ ଚିତ୍ତଅର୍ଥର ଦୁଇ ପ୍ରକାରର - ମେଣ୍ଡେଲିଆନ ଏବଂ କ୍ରୋମୋଜମ ଜନିତ।

କେଉଁଟି ଏକ ଭଡ଼ି ସମ୍ବନ୍ଧିତ ରୋଗ?

1. ଆଷାରିଆସିସ
2. କଲର ଅନ୍ଧତ୍ୱ (ରଙ୍ଗ ଦୃଷ୍ଟିଦୋଷ)
3. ଥାଲସିମିଆ
4. ଫେନିଲକିଟୋନ୍ୟୁରିଆ

Options :

485584145713. 1
485584145714. 2
485584145715. 3
485584145716. 4

Question Number : 45 Question Id : 48558436430 Question Type : MCQ Option Shuffling : No Is Question Mandatory : No Calculator : None Response Time : N.A Think Time : N.A Minimum Instruction Time : 0

Correct Marks : 5 Wrong Marks : 1

Question Key Details :

Key	Value
Comprehension	Comp1

Read the given paragraph and answer the question:

Humans have 23 pairs of chromosomes. 22 pairs are exactly same in both males and females; these are the autosomes. A pair of X-chromosome are present in the female, whereas the presence of an X and Y chromosome are determinant of the male characteristic.

A number of disorders in human beings have been found to be associated with the inheritance of changed or altered genes or chromosomes. Broadly, genetic disorder may be grouped into two categories-Mendelian disorders and Chromosomal disorders.

A colour blind man marries a carrier woman. Choose the possible progeny outcome:

1. All sons are born colourblind, while 50% the daughter born will be normal.
2. All children (sons and daughters) are born colour blind.
3. All daughters are normal whereas 50% of the sons born will be colour blind.
4. 50% of daughters and 50% of sons born will be colour blind.

Options :

485584145717. 1
485584145718. 2
485584145719. 3
485584145720. 4

Question Number : 45 Question Id : 48558436430 Question Type : MCQ Option Shuffling : No Is Question Mandatory : No Calculator : None Response Time : N.A Think Time : N.A Minimum Instruction Time : 0

Correct Marks : 5 Wrong Marks : 1

Question Key Details :

Key	Value
Comprehension	Comp1

ପାଠ୍ୟପୁସ୍ତକ ପଢ଼ି Q. 41-45 ର ଉତ୍ତର ଦିଅନ୍ତୁ।

ମଣିଷ ମାନବର 23 ଯୋଡ଼ା କ୍ରୋମୋଜମ ରହିଛି। 22 ଯୋଡ଼ା ନାରୀପୁରୁଷ ପାଇଁ ସମାନ; ଏମାନେ ଅକୋଇସ୍ମ। X କ୍ରୋମୋଜମ ର ଏକ ଯୋଡ଼ା ନାରୀକଠାରେ ରହିଛି। ଯେତେବେଳେ X, Y କ୍ରୋମୋଜମର ଅବସ୍ଥିତି ପୁରୁଷ ସୁଶର ପରିଚାୟକ।

ମଣିଷ ମଧ୍ୟରେ ଦେଖାଯାଉଥିବା ଅନେକଗୁଡ଼ିଏ ଚିତ୍ତଅର୍ଥର ଏହି ଜିନିଷ ପରିବର୍ତ୍ତନ କିମ୍ବା ସହଜରୁ ଜାତୀୟ ପୁସ୍ତକର ଲେଖକଙ୍କ ଚିତ୍ତଅର୍ଥର ଦୁଇ ପ୍ରକାରର - ମେଣ୍ଡେଲିଆନ ଏବଂ କ୍ରୋମୋଜମ ଜନିତ।

ଏକ ରଙ୍ଗ ଅନ୍ତରାଳ ଶିକାର ବ୍ୟକ୍ତି ବାହନ ସ୍ତ୍ରୀ କୁ ବିବାହ କଲା। ତାଙ୍କ ଛୁଆ ଶୋଭାପାଉଛି:

1. ସବୁ ପୁଅ ଜନ୍ମରୁ ରଙ୍ଗକଣା, 50% ଝିଅ କିନ୍ତୁ ନର୍ମାଲ।
2. ସବୁ ପୁଅ ଝିଅ ଜନ୍ମରୁ ରଙ୍ଗକଣା।
3. ସବୁ ଝିଅ ନର୍ମାଲ ମାତ୍ର ପୁଅ ରଙ୍ଗକଣା।
4. 50% ପୁଅ ଝିଅ 50% ଝିଅ ରଙ୍ଗକଣା।

Options :

485584145717. 1
485584145718. 2
485584145719. 3
485584145720. 4

Sub-Section Number :

3

Sub-Section Id :

4855842692

Question Shuffling Allowed :

No

Is Section Default? :

null

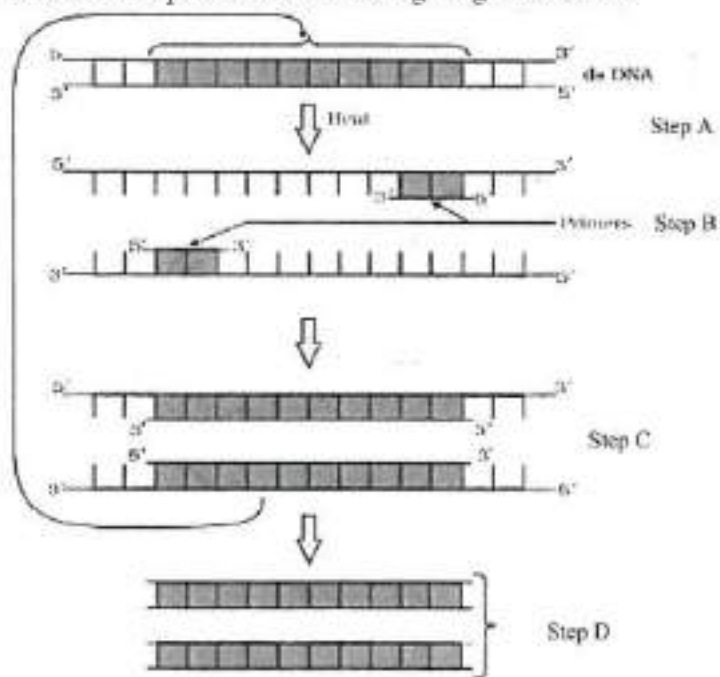
Question Number : 46 Question Id : 48558436431 Question Type : MCQ Option Shuffling : No Is Question Mandatory : No Calculator : None Response Time : N.A Think Time : N.A Minimum Instruction Time : 0

Correct Marks : 5 Wrong Marks : 1

Question Key Details :

Key	Value
Comprehension	Comp2

Answer the questions from the figure given below:



If the reaction starts with one molecule of DNA, the number of cycles required to produce one billion amplified products is:

1. 8 cycles
2. 16 cycles
3. 30 cycles
4. 25 cycles

Options :

- 485584145721. 1
- 485584145722. 2
- 485584145723. 3
- 485584145724. 4

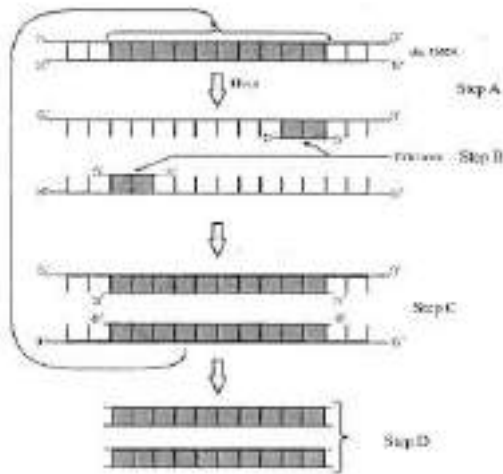
Question Number : 46 Question Id : 48558436431 Question Type : MCQ Option Shuffling : No Is Question Mandatory : No Calculator : None Response Time : N.A Think Time : N.A Minimum Instruction Time : 0

Correct Marks : 5 Wrong Marks : 1

Question Key Details :

Key	Value
Comprehension	Comp2

Q. (46-50) ର ଉତ୍ତର ଦିଅ:



ଯଦି ପ୍ରତିକ୍ରିୟା 1 ମଧ୍ୟରୁ DNA ରୁ ଆରମ୍ଭ ହୁଏ, କେତେଟି ସାଇକଲ (ଚକ୍ର) ରେ 100 କୋଷି ଆମ୍ବିଫାଏଡ଼ ଉତ୍ପାଦ ହେବ।

1. 8
2. 16
3. 30
4. 25

Options :

485584145721. 1
485584145722. 2
485584145723. 3
485584145724. 4

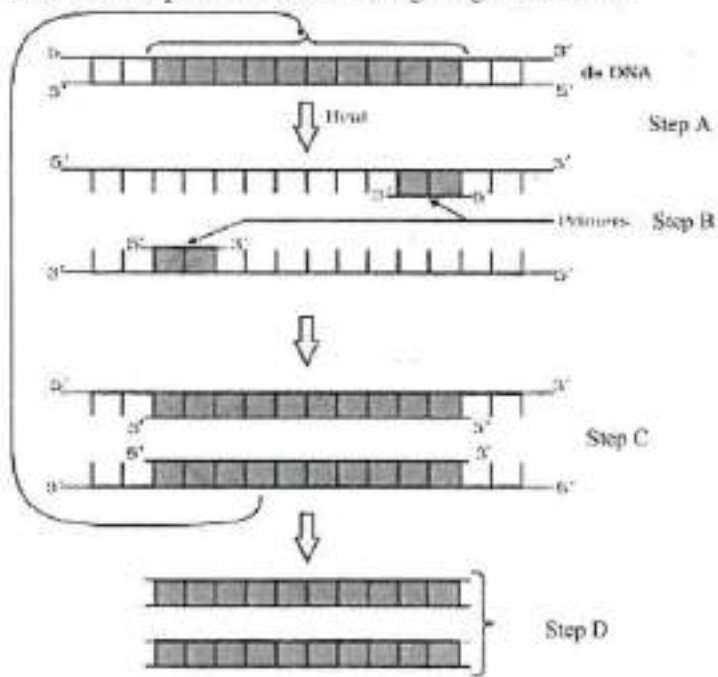
Question Number : 47 Question Id : 48558436432 Question Type : MCQ Option Shuffling : No Is Question Mandatory : No Calculator : None Response Time : N.A Think Time : N.A Minimum Instruction Time : 0

Correct Marks : 5 Wrong Marks : 1

Question Key Details :

Key	Value
Comprehension	Comp2

Answer the questions from the figure given below:



'Taq' in Taq polymerase stands for:

1. *Thermal aqua*
2. *Thermal aquaticus*
3. *Thermas aqua*
4. *Thermus aquaticus*

Options :

- 485584145725. 1
- 485584145726. 2
- 485584145727. 3
- 485584145728. 4

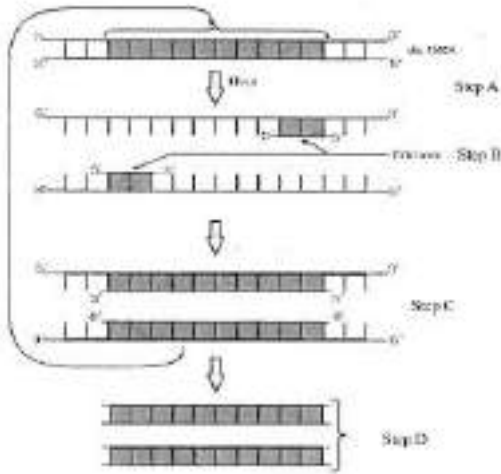
Question Number : 47 Question Id : 48558436432 Question Type : MCQ Option Shuffling : No Is Question Mandatory : No Calculator : None Response Time : N.A Think Time : N.A Minimum Instruction Time : 0

Correct Marks : 5 Wrong Marks : 1

Question Key Details :

Key	Value
Comprehension	Comp2

Q. (46-50) ର ଉତ୍ତର ଦିଅ:



'Tag' ଟାକ ପଲିମିରେକ ରେ ସେତକ୍ତି:

1. ଥର୍ମାଲ ଆକ୍ସ
2. ଥର୍ମାଲ ଆକ୍ସାଟିଭସ
3. ଥର୍ମସ ଆକ୍ସ
4. ଥର୍ମସ ଆକ୍ସାଟିଭସ

Options :

- 485584145725. 1
- 485584145726. 2
- 485584145727. 3
- 485584145728. 4

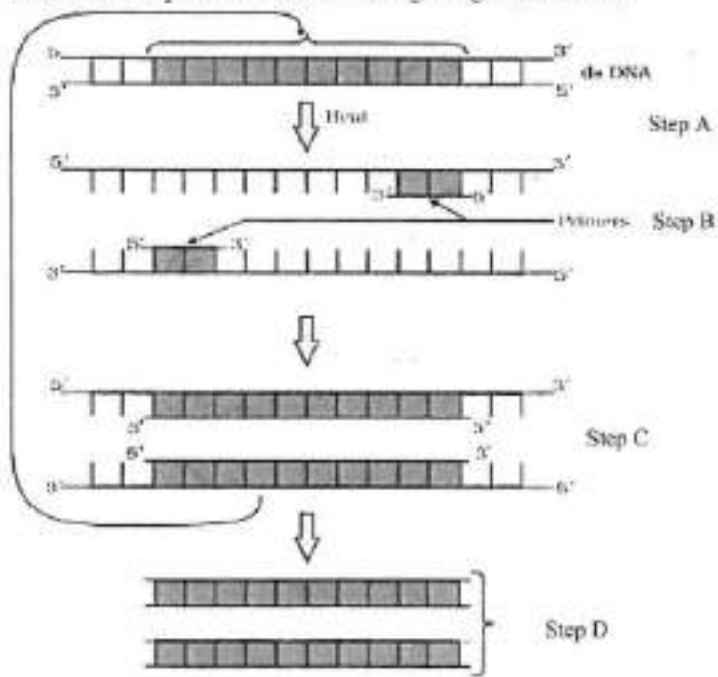
Question Number : 48 Question Id : 48558436433 Question Type : MCQ Option Shuffling : No Is Question Mandatory : No Calculator : None Response Time : N.A Think Time : N.A Minimum Instruction Time : 0

Correct Marks : 5 Wrong Marks : 1

Question Key Details :

Key	Value
Comprehension	Comp2

Answer the questions from the figure given below:



Taq polymerase is the preferred DNA polymerase in PCR because :

1. It is obtained from a fast breeding bacteria.
2. It can bind with the primers efficiently.
3. It remains active during high temperature.
4. It has high turnover rate.

Options :

- 485584145729. 1
- 485584145730. 2
- 485584145731. 3
- 485584145732. 4

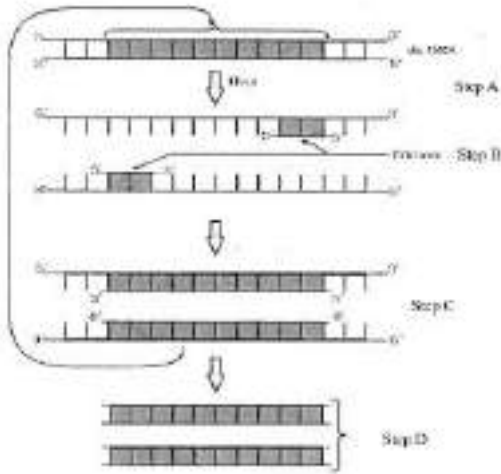
Question Number : 48 Question Id : 48558436433 Question Type : MCQ Option Shuffling : No Is Question Mandatory : No Calculator : None Response Time : N.A Think Time : N.A Minimum Instruction Time : 0

Correct Marks : 5 Wrong Marks : 1

Question Key Details :

Key	Value
Comprehension	Comp2

Q. (46-50) ର ଉତ୍ତର ଦିଅ:



PCR ରେ ତାଙ୍କ ପରିଚିତରେ, DNA ପରିଚିତରେ କି ରୂପେ ପଦକ୍ଷେପ ଗ୍ରହଣ କରାଯାଏ:

1. ଏହା ଏକ ଶୀଘ୍ର ବ୍ୟାପକ ବିସ୍ତାର କରୁଥିବା ବ୍ୟାକ୍ଟେରିଆରୁ କାଟ
2. ଏହା ପ୍ରାକାଶର ସହ ବନ୍ଧ ଭାବେ ବାନ୍ଧି ହୁଏ
3. ଏହା ଉଚ୍ଚ ତାପମାତ୍ରାରେ ବି କାର୍ଯ୍ୟକ୍ଷମ ରୁହେ
4. ଏହାର ଉଚ୍ଚ ଚର୍ଚ୍ଚିତର ସ୍ଥାନ ରହିଛି

Options :

- 485584145729. 1
- 485584145730. 2
- 485584145731. 3
- 485584145732. 4

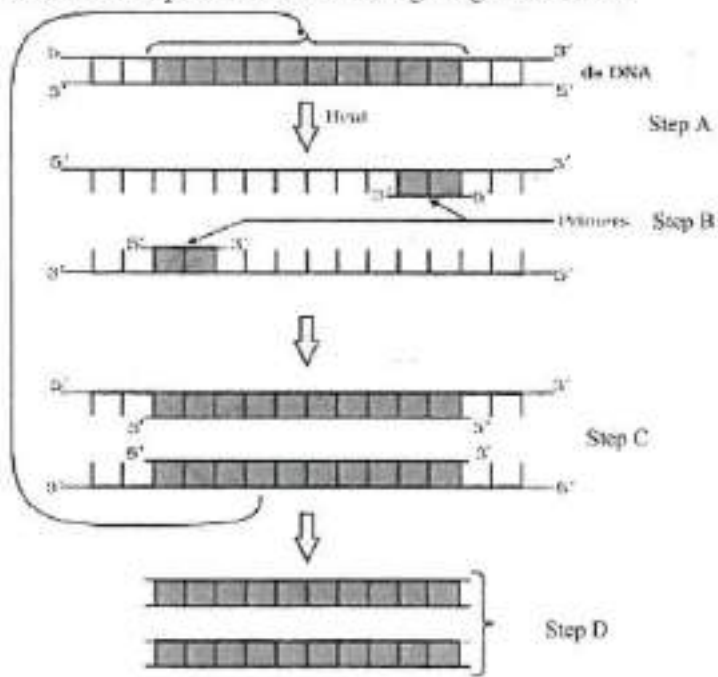
Question Number : 49 Question Id : 48558436434 Question Type : MCQ Option Shuffling : No Is Question Mandatory : No Calculator : None Response Time : N.A Think Time : N.A Minimum Instruction Time : 0

Correct Marks : 5 Wrong Marks : 1

Question Key Details :

Key	Value
Comprehension	Comp2

Answer the questions from the figure given below:



The step 'D' in the figure depicts:

1. Region where the restriction enzyme cuts.
2. An important gene of interest
3. Primer joining region
4. Only amplified product

Options :

- 485584145733. 1
- 485584145734. 2
- 485584145735. 3
- 485584145736. 4

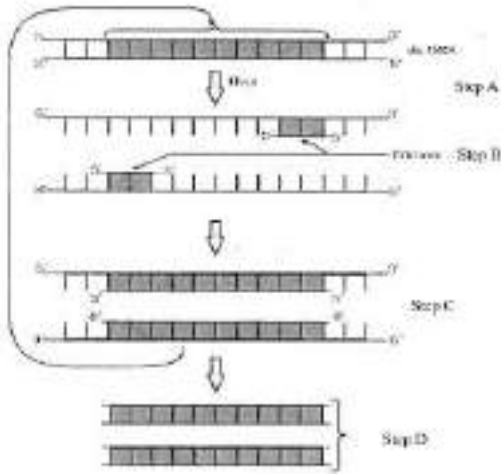
Question Number : 49 Question Id : 48558436434 Question Type : MCQ Option Shuffling : No Is Question Mandatory : No Calculator : None Response Time : N.A Think Time : N.A Minimum Instruction Time : 0

Correct Marks : 5 Wrong Marks : 1

Question Key Details :

Key	Value
Comprehension	Comp2

Q. (46-50) ର ଉତ୍ତର ଦିଅ:



ଚିତ୍ରରେ 'D' ଦର୍ଶାଏ:

1. ବିବିଧନ (କ୍ଷେତ୍ର) ଯେଉଁଠି ଚୋରିକୃତ ଏଞ୍ଜାଇନ କାଟିଦିଏ
2. ଏହା ଗୁରୁତ୍ୱପୂର୍ଣ୍ଣ ଜିନ
3. ପ୍ରାକମର ବାଟି କେଉଁଥିବା କ୍ଷେତ୍ର
4. କେବଳ ଏହିପ୍ରାୟତଃ ଉତ୍ପାଦ

Options :

- 485584145733. 1
- 485584145734. 2
- 485584145735. 3
- 485584145736. 4

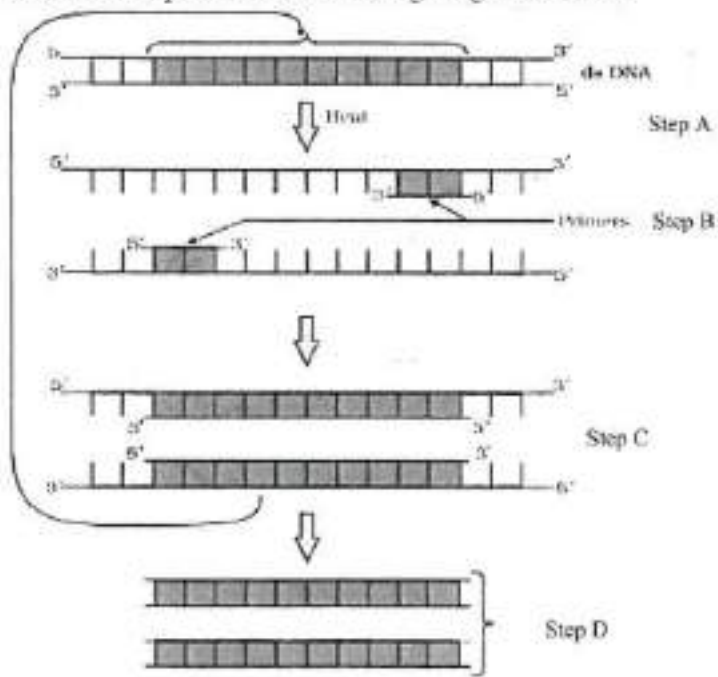
Question Number : 50 Question Id : 48558436435 Question Type : MCQ Option Shuffling : No Is Question Mandatory : No Calculator : None Response Time : N.A Think Time : N.A Minimum Instruction Time : 0

Correct Marks : 5 Wrong Marks : 1

Question Key Details :

Key	Value
Comprehension	Comp2

Answer the questions from the figure given below:



The step 'B' in the figure is called as:

1. Termination
2. Extension
3. Annealing
4. Reannealing

Options :

- 485584145737. 1
- 485584145738. 2
- 485584145739. 3
- 485584145740. 4

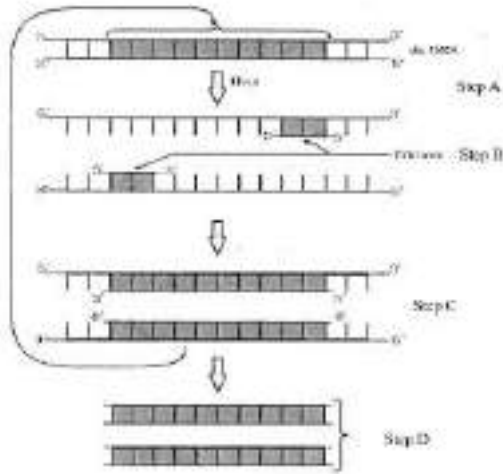
Question Number : 50 Question Id : 48558436435 Question Type : MCQ Option Shuffling : No Is Question Mandatory : No Calculator : None Response Time : N.A Think Time : N.A Minimum Instruction Time : 0

Correct Marks : 5 Wrong Marks : 1

Question Key Details :

Key	Value
Comprehension	Comp2

Q. (46-50) ର ଉତ୍ତର ଦିଅ:



ଚିତ୍ରରେ 'B' କ୍ରମକୁ ବୁଝାଯାଏ:

1. ଚର୍ଚ୍ଚନାସମୟ (ପ୍ରତ୍ୟାହାର)
2. ଏକତ୍ରକାରଣ (ନିର୍ଦ୍ଦିଷ୍ଟ ସେବା, କାର୍ଯ୍ୟ ବଢ଼ିବା)
3. ଆବେଦନ (ଆହୁକୁ ଚାପ ଯୋଗାଇ)
4. ବିତରଣ

Options :

485584145737. 1
485584145738. 2
485584145739. 3
485584145740. 4

Business Studies

Group Number :	3
Group Id :	485584823
Group Maximum Duration :	45
Group Minimum Duration :	45
Show Attended Group? :	No
Edit Attended Group? :	No
Break time :	0
Group Marks :	200
Is this Group for Examiner? :	No
Examiner permission :	Cant View
Show Progress Bar? :	No

Business Studies

Section Id :	485584947
--------------	-----------

Section Number : 1
Section type : Online
Mandatory or Optional : Mandatory
Number of Questions : 50
Number of Questions to be attempted : 40
Section Marks : 200
Enable Mark as Answered Mark for Review and Clear Response : Yes
Maximum Instruction Time : 0
Sub-Section Number : 1
Sub-Section Id : 4855842693
Question Shuffling Allowed : Yes
Is Section Default? : null

Question Number : 51 Question Id : 48558436436 Question Type : MCQ Option Shuffling : No Is Question Mandatory : No Calculator : None Response Time : N.A Think Time : N.A Minimum Instruction Time : 0 Correct Marks : 5 Wrong Marks : 1

Question Key Details :

Key	Value
Comprehension	MCQ

Which of the following is not an importance of management ?

1. Management is group activity
2. Management creates a dynamic organization
3. Management helps in the development of society
4. Management increases efficiency

Options :

485584145741. 1
485584145742. 2
485584145743. 3
485584145744. 4

Question Number : 51 Question Id : 48558436436 Question Type : MCQ Option Shuffling : No Is Question Mandatory : No Calculator : None Response Time : N.A Think Time : N.A Minimum Instruction Time : 0 Correct Marks : 5 Wrong Marks : 1

Question Key Details :

Key	Value
Comprehension	MCQ

ନିମ୍ନଲିଖିତ ମଧ୍ୟରୁ କେଉଁଟି ପରିଚାଳନା ପ୍ରଧାନ୍ୟ ରୂପେ

1. ପରିଚାଳନା ହେଉଛି ଏକ ରୋଷିରତ ପ୍ରକ୍ରିୟା
2. ପରିଚାଳନା ସୃଷ୍ଟିକରେ ଏକ ଶକ୍ତିଶାଳୀ ସଂସ୍ଥା
3. ସମାଜର ଉନ୍ନତିରେ ପରିଚାଳନା ସାହାଯ୍ୟ କରିଥାଏ
4. ପରିଚାଳନା କାର୍ଯ୍ୟକ୍ଷମତା ବଢ଼ାଇଥାଏ

Options :

485584145741. 1
485584145742. 2
485584145743. 3
485584145744. 4

Question Number : 52 Question Id : 48558436437 Question Type : MCQ Option Shuffling : No Is Question Mandatory : No Calculator : None Response Time : N.A Think Time : N.A Minimum Instruction Time : 0

Correct Marks : 5 Wrong Marks : 1

Question Key Details :

Key	Value
Comprehension	MCQ

Mc.Donalds, the fast food giant made major changes in its menu to be able to survive in Indian market. Which feature of management is reflected in above case ?

1. Management is an intangible force
2. Management is a dynamic function
3. Management is all pervasive
4. Management is multidimensional

Options :

485584145745. 1
485584145746. 2
485584145747. 3
485584145748. 4

Question Number : 52 Question Id : 48558436437 Question Type : MCQ Option Shuffling : No Is Question Mandatory : No Calculator : None Response Time : N.A Think Time : N.A Minimum Instruction Time : 0

Correct Marks : 5 Wrong Marks : 1

Question Key Details :

Key	Value
Comprehension	MCQ

ଜାରତୀୟ ସମାଜରେ ପାଠ୍ୟପୁସ୍ତକକୁ ସମ୍ପାଦନ କରିବା ପାଇଁ ନେତୃ ତତ୍ପରତାକୁ କ'ଣ ବଢ଼ିଥିଲା?

1. ପରିଚାଳନା ଏକ ଆକାରହୀନ ଶକ୍ତି
2. ପରିଚାଳନା ଏକ ଶକ୍ତିଶାଳୀ ପଦ୍ଧତି
3. ପରିଚାଳନା ଏକ ସମ୍ପୂର୍ଣ୍ଣ ବୃତ୍ତି
4. ପରିଚାଳନା ଏକ ବହୁମୁଖୀ

Options :

485584145745. 1
485584145746. 2
485584145747. 3
485584145748. 4

Question Number : 53 Question Id : 48558436438 Question Type : MCQ Option Shuffling : No Is Question Mandatory : No Calculator : None Response Time : N.A Think Time : N.A Minimum Instruction Time : 0

Correct Marks : 5 Wrong Marks : 1

Question Key Details :

Key	Value
Comprehension	MCQ

"Planning is an Activity which enables a manager to look ahead and anticipate changes." Identify the point of Importance of Planning.

1. Planning reduces the risk of uncertainty
2. Planning facilitates decision making
3. Planning establishes standards for controlling
4. Planning provide directions

Options :

485584145749. 1
485584145750. 2
485584145751. 3
485584145752. 4

Question Number : 53 Question Id : 48558436438 Question Type : MCQ Option Shuffling : No Is Question Mandatory : No Calculator : None Response Time : N.A Think Time : N.A Minimum Instruction Time : 0

Correct Marks : 5 Wrong Marks : 1

Question Key Details :

Key	Value
Comprehension	MCQ

ଯୋଜନା ଏକ ପ୍ରକ୍ରିୟା ଯାହାଦ୍ୱାରା ପରିଚାଳନା ଆରମ୍ଭ କରିବା ଏବଂ କିଛି ଆକାଂକ୍ଷିତ ପରିବର୍ତ୍ତନକୁ ଚିହ୍ନଟ କରିବାରେ ପ୍ରାଧିକାରୀ ଦେଖାଯାଏ ।

1. ଯୋଜନା ଅନିଶ୍ଚିତ ଭାବେ କରାଯାଏ
2. ଯୋଜନା ଚିହ୍ନଟ ନେବା ସୁଯୋଗ ଦେଖାଯାଏ ।
3. ଯୋଜନା ନିୟନ୍ତ୍ରଣ ପାଇଁ ମାନ ନିର୍ଦ୍ଧାରଣ କରେ
4. ଯୋଜନା ବିକ୍ରୟ ଦେଖାଯାଏ

Options :

- 485584145749. 1
- 485584145750. 2
- 485584145751. 3
- 485584145752. 4

Question Number : 54 Question Id : 48558436439 Question Type : MCQ Option Shuffling : No Is Question Mandatory : No Calculator : None Response Time : N.A Think Time : N.A Minimum Instruction Time : 0

Correct Marks : 5 Wrong Marks : 1

Question Key Details :

Key	Value
Comprehension	MCQ

Ravi is working as supervisor with Zinc limited. Identify the level of management at which Ravi is employed.

1. Top Management
2. Middle Management
3. Operational Management
4. Apex Management

Options :

- 485584145753. 1
- 485584145754. 2
- 485584145755. 3
- 485584145756. 4

Question Number : 54 Question Id : 48558436439 Question Type : MCQ Option Shuffling : No Is Question Mandatory : No Calculator : None Response Time : N.A Think Time : N.A Minimum Instruction Time : 0

Correct Marks : 5 Wrong Marks : 1

Question Key Details :

Key	Value
Comprehension	MCQ

ଉତ୍ତର Zinc limited ରେ ପରିଚାଳନା ଗଠନରେ କାର୍ଯ୍ୟକାରୀ ଥିବା କେଉଁ ସ୍ତରୀୟତା ଉପସ୍ଥାପନ ?

1. Top Management
2. Middle Management
3. Operational Management
4. Apex Management

Options :

- 485584145753. 1
- 485584145754. 2
- 485584145755. 3
- 485584145756. 4

Question Number : 55 Question Id : 48558436440 Question Type : MCQ Option Shuffling : No Is Question Mandatory : No Calculator : None Response Time : N.A Think Time : N.A Minimum Instruction Time : 0

Correct Marks : 5 Wrong Marks : 1

Question Key Details :

Key	Value
Comprehension	MCQ

In this type of Organizational structure, the cost may increase since there may be a duplication of activities across products. Identify the organizational structure.

1. Functional Structure
2. Delegated Structure
3. Divisional Structure
4. Informal Structure

Options :

- 485584145757. 1
- 485584145758. 2
- 485584145759. 3
- 485584145760. 4

Question Number : 55 Question Id : 48558436440 Question Type : MCQ Option Shuffling : No Is Question Mandatory : No Calculator : None Response Time : N.A Think Time : N.A Minimum Instruction Time : 0

Correct Marks : 5 Wrong Marks : 1

Question Key Details :

Key	Value
Comprehension	MCQ

ଏହି ପ୍ରକାର ସଜାଠନାତ୍ମକ ଢାଞ୍ଚାରେ ଗର୍ଭାବସର ବସ୍ତିଯାତ୍ରାରେ କାରଣ ସବୁଯାକ ତତ୍ପାଦରେ କାର୍ଯ୍ୟକଳାପ ଗୁଡ଼ିକ ନକଲି ଚେବାର ସମ୍ଭାବନା ଥାଏ ।

1. କାର୍ଯ୍ୟାତ୍ମକ ଢାଞ୍ଚା (Functional Structure)
2. ପ୍ରତିଧନିତ୍ୱ ଢାଞ୍ଚା (Delegated Structure)
3. ବିଭାଗୀୟ ଢାଞ୍ଚା (Divisional Structure)
4. ବିଧିଗୁଣ୍ୟ ଢାଞ୍ଚା (Informal Structure)

Options :

- 485584145757. 1
- 485584145758. 2
- 485584145759. 3
- 485584145760. 4

Question Number : 56 Question Id : 48558436441 Question Type : MCQ Option Shuffling : No Is Question Mandatory : No Calculator : None Response Time : N.A Think Time : N.A Minimum Instruction Time : 0

Correct Marks : 5 Wrong Marks : 1

Question Key Details :

Key	Value
Comprehension	MCQ

Divisional Structure is based on _____.

1. Product Lines
2. Functional Lines
3. Informal Basis
4. Occupational Specialization

Options :

- 485584145761. 1
- 485584145762. 2
- 485584145763. 3
- 485584145764. 4

Question Number : 56 Question Id : 48558436441 Question Type : MCQ Option Shuffling : No Is Question Mandatory : No Calculator : None Response Time : N.A Think Time : N.A Minimum Instruction Time : 0

Correct Marks : 5 Wrong Marks : 1

Question Key Details :

Key	Value
Comprehension	MCQ

ବିଭାଜନ ଗଠନ _____ ଉପରେ ଭିତ୍ତି କରେ ।

1. ଉତ୍ପାଦନ କ୍ଷେତ୍ର
2. ସମ୍ବଳାୟ କ୍ଷେତ୍ର
3. ବିଧିଗୁଣ୍ୟ ଆଧାର
4. ନିର୍ଦ୍ଦିଷ୍ଟ ଦୁର୍ଭିଗତ

Options :

485584145761. 1
485584145762. 2
485584145763. 3
485584145764. 4

Question Number : 57 Question Id : 48558436442 Question Type : MCQ Option Shuffling : No Is Question Mandatory : No Calculator : None Response Time : N.A Think Time : N.A Minimum Instruction Time : 0

Correct Marks : 5 Wrong Marks : 1

Question Key Details :

Key	Value
Comprehension	MCQ

_____ can be delegated.

1. Responsibility
2. Authority
3. Accountability
4. Answerability

Options :

485584145765. 1
485584145766. 2
485584145767. 3
485584145768. 4

Question Number : 57 Question Id : 48558436442 Question Type : MCQ Option Shuffling : No Is Question Mandatory : No Calculator : None Response Time : N.A Think Time : N.A Minimum Instruction Time : 0

Correct Marks : 5 Wrong Marks : 1

Question Key Details :

Key	Value
Comprehension	MCQ

ଉପସାଧିତ କରିପାରେ

1. ଦାୟିତ୍ୱଭାର
2. ପ୍ରଭୁତ୍ୱ
3. ଭରସାଯୋଗ୍ୟତା
4. ଭରସାଯୋଗ୍ୟତା

Options :

485584145765. 1
485584145766. 2
485584145767. 3
485584145768. 4

Question Number : 58 Question Id : 48558436443 Question Type : MCQ Option Shuffling : No Is Question Mandatory : No Calculator : None Response Time : N.A Think Time : N.A Minimum Instruction Time : 0

Correct Marks : 5 Wrong Marks : 1

Question Key Details :

Key	Value
Comprehension	MCQ

_____ Test is a measure of individuals potential for learning new skills.

1. Trade tests
2. Personality tests
3. Aptitude tests
4. Intelligence tests

Options :

485584145769. 1
485584145770. 2
485584145771. 3
485584145772. 4

Question Number : 58 Question Id : 48558436443 Question Type : MCQ Option Shuffling : No Is Question Mandatory : No Calculator : None Response Time : N.A Think Time : N.A Minimum Instruction Time : 0

Correct Marks : 5 Wrong Marks : 1

Question Key Details :

Key	Value
Comprehension	MCQ

ପରୀକ୍ଷା ହେଉଛି ବ୍ୟକ୍ତିର ଅବଦାନକୁ ମୂଲ୍ୟାଙ୍କନ କରିବା ପାଇଁ ।

1. ବାଣିଜ୍ୟ ପରୀକ୍ଷା

2. ବ୍ୟକ୍ତିଗତ ପରୀକ୍ଷା

3. ପ୍ରତ୍ୟକ୍ତ ପରୀକ୍ଷା

4. ପାଠ୍ୟପୁସ୍ତକ ପରୀକ୍ଷା

Options :

485584145769. 1

485584145770. 2

485584145771. 3

485584145772. 4

Question Number : 59 Question Id : 48558436444 Question Type : MCQ Option Shuffling : No Is Question Mandatory : No Calculator : None Response Time : N.A Think Time : N.A Minimum Instruction Time : 0

Correct Marks : 5 Wrong Marks : 1

Question Key Details :

Key	Value
Comprehension	MCQ

"Many reputed organizations keep a database of unsolicited applications in their offices based on which a list of job-seekers can be prepared and can be screened to fill the vacancies as they arise". Identify the source referred of recruitment above.

1. Direct Recruitment

2. Campus Recruitment

3. Labour Contractors

4. Casual Callers

Options :

485584145773. 1

485584145774. 2

485584145775. 3

485584145776. 4

Question Number : 59 Question Id : 48558436444 Question Type : MCQ Option Shuffling : No Is Question Mandatory : No Calculator : None Response Time : N.A Think Time : N.A Minimum Instruction Time : 0

Correct Marks : 5 Wrong Marks : 1

Question Key Details :

Key	Value
Comprehension	MCQ

"ବହୁଗୁଡ଼ିଏ ସମ୍ମାନ ଜନକ ସଂସ୍ଥାମାନେ ଅନାବଶ୍ୟକ ଆବେଦନମାନେ, ତାଙ୍କ କାର୍ଯ୍ୟାଳୟ ତାଲିକାରେ (ଅଭିକଳନ)ରେ ଉତ୍ପାଦି ଯାହାକୁ ଆଧାର କରି ଗୋଟିଏ ନିୟୁତ୍ତି ଖୋଲୁଥିବା ଲୋକଙ୍କ ତାଲିକା ପ୍ରସ୍ତୁତ କରାଯାଇପାରିବ ଏବଂ ତାକୁ ଯାଞ୍ଚ କରି ବିଶ୍ୱାସନୀୟତ୍ୱକ ଜପୁତିବା ସମୟରେ ନିୟୁତ୍ତି ପାଇଁ ପୂର୍ଣ୍ଣ କରାଯାଇ ପାରିବ ।" ଯେଉଁ ଉପକୂଳ ଉଲ୍ଲେଖ କରାଯାଇଛି, ତାହାକୁ ଚିହ୍ନଟ କରନ୍ତୁ ।

1. ସିଧା ସରଳ ନିୟୁତ୍ତି
2. କ୍ୟାମ୍ପସ୍ ନିୟୁତ୍ତି
3. ଶ୍ରମ ତୁଣ୍ଡିକାରଣ (Labour Contractors)
4. ଆକସ୍ମିକ ଡାକଦେବା ବ୍ୟକ୍ତି (Casual Callers)

Options :

- 485584145773. 1
- 485584145774. 2
- 485584145775. 3
- 485584145776. 4

Question Number : 60 Question Id : 48558436445 Question Type : MCQ Option Shuffling : No Is Question Mandatory : No Calculator : None Response Time : N.A Think Time : N.A Minimum Instruction Time : 0

Correct Marks : 5 Wrong Marks : 1

Question Key Details :

Key	Value
Comprehension	MCQ

It involves shifting of an employee from one job to another, one department to another or from one shift to another, without a substantive change in the responsibilities and status of an employee. It is known as _____.

1. Training
2. Transfer
3. Promotion
4. Development

Options :

- 485584145777. 1
- 485584145778. 2
- 485584145779. 3
- 485584145780. 4

Question Number : 60 Question Id : 48558436445 Question Type : MCQ Option Shuffling : No Is Question Mandatory : No Calculator : None Response Time : N.A Think Time : N.A Minimum Instruction Time : 0

Correct Marks : 5 Wrong Marks : 1

Question Key Details :

Key	Value
Comprehension	MCQ

ଉତ୍ତର ଗ୍ରହଣ କରନ୍ତୁ ଯେଉଁଠି ସମ୍ଭବ, ଯେଉଁଠି ବିଭାଗରୁ ଅନ୍ୟ ବିଭାଗ ଯେଉଁଠି ମୋଟରରୁ ଅନ୍ୟକୁ ବୌଦ୍ଧିକ ଦକ୍ଷତା ପ୍ରଦାନ ପରିବର୍ତ୍ତନ କରି
ପାରି ଉପାୟ -

1. ଭାବନା
2. ବ୍ୟବସ୍ଥା
3. ପଦୋଚ୍ଚାରଣ
4. ବିକାଶ

Options :

485584145777. 1
485584145778. 2
485584145779. 3
485584145780. 4

**Question Number : 61 Question Id : 48558436446 Question Type : MCQ Option Shuffling : No Is Question Mandatory :
No Calculator : None Response Time : N.A Think Time : N.A Minimum Instruction Time : 0**

Correct Marks : 5 Wrong Marks : 1

Question Key Details :

Key	Value
Comprehension	MCQ

Organizational barriers to communication do not include :

1. Rules and regulations
2. Status
3. Organizational Policy
4. Lack of attention

Options :

485584145781. 1
485584145782. 2
485584145783. 3
485584145784. 4

**Question Number : 61 Question Id : 48558436446 Question Type : MCQ Option Shuffling : No Is Question Mandatory :
No Calculator : None Response Time : N.A Think Time : N.A Minimum Instruction Time : 0**

Correct Marks : 5 Wrong Marks : 1

Question Key Details :

Key	Value
Comprehension	MCQ

ପ୍ରତିଷ୍ଠାନ ମାନକରେ ଯୋଗାଯୋଗ ପ୍ରତିରୋଧକୁ ଅବହେଳା କରାଯାଇ ନପାଏ ଯାହାକି

1. ନିତି ଓ ନିୟମ
2. ଘବସା
3. ପ୍ରତିଷ୍ଠାନର ଯୋଜନା
4. ସ୍ଥାନ ବ୍ୟବହାରର ଅଭାବ

Options :

485584145781. 1
485584145782. 2
485584145783. 3
485584145784. 4

Question Number : 62 Question Id : 48558436447 Question Type : MCQ Option Shuffling : No Is Question Mandatory : No Calculator : None Response Time : N.A Think Time : N.A Minimum Instruction Time : 0

Correct Marks : 5 Wrong Marks : 1

Question Key Details :

Key	Value
Comprehension	MCQ

_____ means giving more autonomy and power to subordinates. This feeling contributes positively to the use of skills and talents in the job performance.

1. Employee Recognition Programme
2. Employee Empowerment
3. Status
4. Job Security

Options :

485584145785. 1
485584145786. 2
485584145787. 3
485584145788. 4

Question Number : 62 Question Id : 48558436447 Question Type : MCQ Option Shuffling : No Is Question Mandatory : No Calculator : None Response Time : N.A Think Time : N.A Minimum Instruction Time : 0

Correct Marks : 5 Wrong Marks : 1

Question Key Details :

Key	Value
Comprehension	MCQ

ଉପାୟ ହେଉଛି ଅଧିକ କର୍ମଚାରୀ ମାନଙ୍କୁ ଅଧିକ ସ୍ୱାଧୀନତା ଓ ଜମିନୀ ପ୍ରଦାନ କରିବା । ଏହି ଅନୁରୋଧ, ବିଜ୍ଞ ଓ ଦକ୍ଷତାକୁ ସଫଳତାପୂର୍ଣ୍ଣ ଭାବରେ ବ୍ୟବହାର କରିବାରେ ଏବଂ କର୍ତ୍ତବ୍ୟ ପାଳନ କରି ଉତ୍ପାଦନ ବୃଦ୍ଧିରେ ଯୋଗଦାନ ଦେଇଥାଏ ।

1. କର୍ମଚାରୀ ଚିହ୍ନିତ କାର୍ଯ୍ୟକ୍ରମ (Employee Recognition Programme)
2. କର୍ମଚାରୀଙ୍କ ହସ୍ତରେ ଜମିନୀ (Employee Empowerment)
3. ଉଚ୍ଚତର ସାମାଜିକ ସ୍ଥାନ (Status)
4. ଚାକିରୀ ସୁରକ୍ଷା (Job Security)

Options :

- 485584145785. 1
- 485584145786. 2
- 485584145787. 3
- 485584145788. 4

Question Number : 63 Question Id : 48558436448 Question Type : MCQ Option Shuffling : No Is Question Mandatory : No Calculator : None Response Time : N.A Think Time : N.A Minimum Instruction Time : 0

Correct Marks : 5 Wrong Marks : 1

Question Key Details :

Key	Value
Comprehension	MCQ

Which type of leader does not believe in the use of power unless it is absolutely essential ?

1. Free-rein / Laissez faire leader
2. Democratic leader
3. Autocratic leader
4. Participative leader

Options :

- 485584145789. 1
- 485584145790. 2
- 485584145791. 3
- 485584145792. 4

Question Number : 63 Question Id : 48558436448 Question Type : MCQ Option Shuffling : No Is Question Mandatory : No Calculator : None Response Time : N.A Think Time : N.A Minimum Instruction Time : 0

Correct Marks : 5 Wrong Marks : 1

Question Key Details :

Key	Value
Comprehension	MCQ

କେଉଁ ପ୍ରକାର ପୁରୋଧା ତାଜ ଉପତା ନିହାତି ଆବଶ୍ୟକ ନହେଲେ ବ୍ୟବହାର କଲେ ନାହିଁ?

1. ମୁକ୍ତ ଶାସନ/ସର୍ବନିମ୍ନ ହତ୍ତକ୍ଷେପ ନେତା (Free-rein / Laissez faire leader)
2. ଗଣତାନ୍ତ୍ରିକ ନେତା (Democratic leader)
3. ଏକହତ୍ତକ୍ଷେପ ନେତା (Autocratic leader)
4. ଭାଗିଦାରୀ ନେତା (Participative leader)

Options :

- 485584145789. 1
- 485584145790. 2
- 485584145791. 3
- 485584145792. 4

Question Number : 64 Question Id : 48558436449 Question Type : MCQ Option Shuffling : No Is Question Mandatory : No Calculator : None Response Time : N.A Think Time : N.A Minimum Instruction Time : 0

Correct Marks : 5 Wrong Marks : 1

Question Key Details :

Key	Value
Comprehension	MCQ

The incentive is offered over and above the wages/salary to the employees is _____.

1. Project Sharing
2. Pay or Allowances
3. Perquisites
4. Bonus

Options :

- 485584145793. 1
- 485584145794. 2
- 485584145795. 3
- 485584145796. 4

Question Number : 64 Question Id : 48558436449 Question Type : MCQ Option Shuffling : No Is Question Mandatory : No Calculator : None Response Time : N.A Think Time : N.A Minimum Instruction Time : 0

Correct Marks : 5 Wrong Marks : 1

Question Key Details :

Key	Value
Comprehension	MCQ

ମନୁରା/ବରମା ବ୍ୟତିତ କର୍ମଚାରୀମାନଙ୍କୁ ବିଆପାରଥିବା ପ୍ରୋହାରନ ରାଶୀକୁ _____ କହନ୍ତି?

1. ପ୍ରଜେକ୍ଟ ସେଲେକ୍ସନ
2. ବରମା ଓ ଭରା
3. ଅତିରିକ୍ତ ପାଠଶା (Perquisites)
4. ଶୋରସ୍

Options :

485584145793. 1
485584145794. 2
485584145795. 3
485584145796. 4

Question Number : 65 Question Id : 48558436450 Question Type : MCQ Option Shuffling : No Is Question Mandatory : No Calculator : None Response Time : N.A Think Time : N.A Minimum Instruction Time : 0

Correct Marks : 5 Wrong Marks : 1

Question Key Details :

Key	Value
Comprehension	MCQ

Ashok went to a shop to buy a tooth paste. The shopkeeper showed him different varieties of toothpaste available in his shop. Ashok took one of them but had an allergy after using it. He later on checked that the product had crossed its expiry date. Which responsibility has Ashok ignored as a customer?

1. Read labels carefully for information such as net weight, price, expiry date etc.
2. Assert that you get a fair deal
3. Ask for a cash memo
4. Avoid waste, littering and contributing to pollution

Options :

485584145797. 1
485584145798. 2
485584145799. 3
485584145800. 4

Question Number : 65 Question Id : 48558436450 Question Type : MCQ Option Shuffling : No Is Question Mandatory : No Calculator : None Response Time : N.A Think Time : N.A Minimum Instruction Time : 0

Correct Marks : 5 Wrong Marks : 1

Question Key Details :

Key	Value
Comprehension	MCQ

ଅଣୋଜ ଦତ୍ତ ନୀଳମ ଜିଣିକାକୁ ଦୋକାନକୁ ଗଲା ।ଦୋକାନୀ ବିଭିନ୍ନ ପ୍ରକାର ଦତ୍ତ ନୀଳମ ଦେଖାଇଲା ।ଅଣୋଜ ଗୋଟିଏ ଜିଣିଲା ଓ ସ୍ତ୍ରୀୟସାର କଲା ପରେ ଠିକ ନଥିଲା । ଦ୍ୟବସାର ସମୟ ସୀମା ଚାଲି ଯାଇଥିଲା ।ଗ୍ରାହକ ଭାବରେ ଅଣୋଜ ଅଣଦେଖା କରିବାର ଦାୟିତ୍ଵ କେଉଁ ପ୍ରାକ୍ ପ୍ରକାରର ?

1. ଓଜନ ,ଗୁଣ୍ୟ ଓ ସ୍ଵୟବସାର ସମୟ ସୀମା
2. ଗଲ ଗୁଣଗର
3. ବିଲ ମାରିବା
4. ଖାରଚ ଜାଣି ଅଗ୍ରାହ୍ୟ କରିବା

Options :

- 485584145797. 1
- 485584145798. 2
- 485584145799. 3
- 485584145800. 4

Question Number : 66 Question Id : 48558436451 Question Type : MCQ Option Shuffling : No Is Question Mandatory : No Calculator : None Response Time : N.A Think Time : N.A Minimum Instruction Time : 0

Correct Marks : 5 Wrong Marks : 1

Question Key Details :

Key	Value
Comprehension	MCQ

It is mandatory for the manufactures to provide information such as ingredients, date of manufacture, price, directions for use, price etc. The consumer right highlighted here is-

1. Right to safety
2. Right to be informed
3. Right to be heard
4. Right to Consumer Education

Options :

- 485584145801. 1
- 485584145802. 2
- 485584145803. 3
- 485584145804. 4

Question Number : 66 Question Id : 48558436451 Question Type : MCQ Option Shuffling : No Is Question Mandatory : No Calculator : None Response Time : N.A Think Time : N.A Minimum Instruction Time : 0

Correct Marks : 5 Wrong Marks : 1

Question Key Details :

Key	Value
Comprehension	MCQ

ଉତ୍ପାଦନ କାରୀ କୌଣସି ବିନିଷ୍କର ଭାରିଖା,ମୁକ୍ତ୍ୟ ,ବ୍ୟବହାର ପ୍ରଣାଳୀ , ପୁରନା ବେତା ବୈଧାନିକ ଅଟେ ।ଗ୍ରାହକ କାଣିବା ଦରକାର

1. Right to safety
2. Right to be informed
3. Right to be heard
4. Right to Consumer Education

Options :

- 485584145801. 1
- 485584145802. 2
- 485584145803. 3
- 485584145804. 4

Question Number : 67 Question Id : 48558436452 Question Type : MCQ Option Shuffling : No Is Question Mandatory : No Calculator : None Response Time : N.A Think Time : N.A Minimum Instruction Time : 0

Correct Marks : 5 Wrong Marks : 1

Question Key Details :

Key	Value
Comprehension	MCQ

Net working capital is computed as _____.

1. Gross current assets
2. Gross current assets - total debt
3. Current assets - External debt
4. Current assets - Current liabilities

Options :

- 485584145805. 1
- 485584145806. 2
- 485584145807. 3
- 485584145808. 4

Question Number : 67 Question Id : 48558436452 Question Type : MCQ Option Shuffling : No Is Question Mandatory : No Calculator : None Response Time : N.A Think Time : N.A Minimum Instruction Time : 0

Correct Marks : 5 Wrong Marks : 1

Question Key Details :

Key	Value
Comprehension	MCQ

ଅବଶିଷ୍ଟ ବର୍ତ୍ତମାନ ମୁକ୍ତି (Net working capital)କୁ _____ ଭାବରେ ଗଣନା କରାଯାଇପାରିବ ।

1. ସମଗ୍ର ବର୍ତ୍ତମାନ ସମ୍ପତ୍ତି (Gross current assets)
2. ସମଗ୍ର ବର୍ତ୍ତମାନ ସମ୍ପତ୍ତି - ସମୁଦାୟ ଭଣ୍ଡ (total debt)
3. ବର୍ତ୍ତମାନ ସମ୍ପତ୍ତି - ବାହ୍ୟ ଭଣ୍ଡ (Current assets - External debt)
4. ବର୍ତ୍ତମାନ ସମ୍ପତ୍ତି - ବର୍ତ୍ତମାନ ଦେୟତା (Current liabilities)

Options :

- 485584145805. 1
- 485584145806. 2
- 485584145807. 3
- 485584145808. 4

Question Number : 68 Question Id : 48558436453 Question Type : MCQ Option Shuffling : No Is Question Mandatory : No Calculator : None Response Time : N.A Think Time : N.A Minimum Instruction Time : 0

Correct Marks : 5 Wrong Marks : 1

Question Key Details :

Key	Value
Comprehension	MCQ

_____ of a company affects both the profitability and the financial risk.

1. Working Capital
2. Capital Structure
3. Fixed Capital
4. Dividend decision

Options :

- 485584145809. 1
- 485584145810. 2
- 485584145811. 3
- 485584145812. 4

Question Number : 68 Question Id : 48558436453 Question Type : MCQ Option Shuffling : No Is Question Mandatory : No Calculator : None Response Time : N.A Think Time : N.A Minimum Instruction Time : 0

Correct Marks : 5 Wrong Marks : 1

Question Key Details :

Key	Value
Comprehension	MCQ

ଗୋଟିଏ ଜଣାଣର _____ ଉତ୍ତର ନାହିଁ ଏବଂ ଚିହ୍ନିତ

1. ଚଳନଶୀଳ ପୁଞ୍ଜି (Working Capital)
2. ପୁଞ୍ଜି ଗଠନ (Capital Structure)
3. ଥାପା ପୁଞ୍ଜି (Fixed Capital)
4. ନାଭାଂଶ ବଣ୍ଟନ ନିର୍ଣ୍ଣୟ (Dividend decision)

Options :

- 485584145809. 1
- 485584145810. 2
- 485584145811. 3
- 485584145812. 4

Question Number : 69 Question Id : 48558436454 Question Type : MCQ Option Shuffling : No Is Question Mandatory : No Calculator : None Response Time : N.A Think Time : N.A Minimum Instruction Time : 0

Correct Marks : 5 Wrong Marks : 1

Question Key Details :

Key	Value
Comprehension	MCQ

Identify the decision in which a company has to choose where to invest its resources so that it is able to earn the maximum possible return for their investors.

1. Working capital decision
2. Financing decision
3. Dividend decision
4. Investment decision

Options :

- 485584145813. 1
- 485584145814. 2
- 485584145815. 3
- 485584145816. 4

Question Number : 69 Question Id : 48558436454 Question Type : MCQ Option Shuffling : No Is Question Mandatory : No Calculator : None Response Time : N.A Think Time : N.A Minimum Instruction Time : 0

Correct Marks : 5 Wrong Marks : 1

Question Key Details :

Key	Value
Comprehension	MCQ

କେଉଁ କ୍ଷେତ୍ରଗୁଡ଼ିକରେ ନିମ୍ନଲିଖିତ ନିମ୍ନଲିଖିତ କୁ ସର୍ବାଧିକ ପ୍ରାଧିକାର ଦିଆଯାଇପାରେ ?

1. Working capital decision
2. Financing decision
3. Dividend decision
4. Investment decision

Options :

- 485584145813. 1
- 485584145814. 2
- 485584145815. 3
- 485584145816. 4

Question Number : 70 Question Id : 48558436455 Question Type : MCQ Option Shuffling : No Is Question Mandatory : No Calculator : None Response Time : N.A Think Time : N.A Minimum Instruction Time : 0

Correct Marks : 5 Wrong Marks : 1

Question Key Details :

Key	Value
Comprehension	MCQ

Select the term that indicates Principles of Management are not rigid prescriptions.

1. Human behaviour
2. Mainly behaviour
3. Contingent
4. Flexible

Options :

- 485584145817. 1
- 485584145818. 2
- 485584145819. 3
- 485584145820. 4

Question Number : 70 Question Id : 48558436455 Question Type : MCQ Option Shuffling : No Is Question Mandatory : No Calculator : None Response Time : N.A Think Time : N.A Minimum Instruction Time : 0

Correct Marks : 5 Wrong Marks : 1

Question Key Details :

Key	Value
Comprehension	MCQ

ବେଉଁଟି ହେଉଛି ସଂଗଠନ ନିୟମ ସୁତାବଳ ବାଧ୍ୟତା କାର୍ଯ୍ୟ ଶୈଳୀ ତୁହେ ?

1. Human behaviour
2. Mainly behaviour
3. Contingent
4. Flexible

Options :

485584145817. 1
485584145818. 2
485584145819. 3
485584145820. 4

Question Number : 71 Question Id : 48558436456 Question Type : MCQ Option Shuffling : No Is Question Mandatory : No Calculator : None Response Time : N.A Think Time : N.A Minimum Instruction Time : 0

Correct Marks : 5 Wrong Marks : 1

Question Key Details :

Key	Value
Comprehension	MCQ

" People and materials must be in suitable places at appropriate time for maximum efficiency."

Application of this principle will lead to:

1. Hindrance in the activities of business/factory
2. Increased productivity and efficiency
3. No discrimination against anyone
4. Justice and kindness in the behaviour of managers.

Options :

485584145821. 1
485584145822. 2
485584145823. 3
485584145824. 4

Question Number : 71 Question Id : 48558436456 Question Type : MCQ Option Shuffling : No Is Question Mandatory : No Calculator : None Response Time : N.A Think Time : N.A Minimum Instruction Time : 0

Correct Marks : 5 Wrong Marks : 1

Question Key Details :

Key	Value
Comprehension	MCQ

ଉପଗୋଚାର ସମ୍ପୂର୍ଣ୍ଣ ମାଧ୍ୟମରେ ଲାଭ କରିବା ଏବଂ ତା' ସହିତ ସାମାଜିକ ଚୈତ୍ୟ ଏବଂ ପରିବେଶ ବିଷୟବସ୍ତୁ ହେଉଛି _____ ବର୍ଗର
ଶାସ୍ତ୍ରର ଗୁଣ

1. ବିକ୍ରୟ ପ୍ରକ୍ରିୟା (Selling)
2. ସାମାଜିକ ବିପଣନ (Societal marketing)
3. ଉତ୍ପାଦ
4. ଉତ୍ପାଦନ

Options :

- 485584145821. 1
- 485584145822. 2
- 485584145823. 3
- 485584145824. 4

Question Number : 72 Question Id : 48558436457 Question Type : MCQ Option Shuffling : No Is Question Mandatory : No Calculator : None Response Time : N.A Think Time : N.A Minimum Instruction Time : 0

Correct Marks : 5 Wrong Marks : 1

Question Key Details :

Key	Value
Comprehension	MCQ

In the principle of Scalar Chain, the shortest route for communication in case of emergency is called:

1. Gang Plank
2. Special route
3. Formal route
4. Protocol

Options :

- 485584145825. 1
- 485584145826. 2
- 485584145827. 3
- 485584145828. 4

Question Number : 72 Question Id : 48558436457 Question Type : MCQ Option Shuffling : No Is Question Mandatory : No Calculator : None Response Time : N.A Think Time : N.A Minimum Instruction Time : 0

Correct Marks : 5 Wrong Marks : 1

Question Key Details :

Key	Value
Comprehension	MCQ

ଅନ୍ୟତମ ସ୍ତରର ଅତିରିକ୍ତ ଘେରା (additional layers) ସାହାଯ୍ୟରେ ଉପରୋକ୍ତ ଘେରା ପର୍ଯ୍ୟନ୍ତ ଉପାଦାନିତ ।

1. ପରସ୍ପରି ପ୍ୟାକେଟ୍
2. ପ୍ୟାକେଟିଙ୍ଗ୍
3. ପ୍ରାଥମିକ ପ୍ୟାକେଟ୍
4. ପରିଚ୍ଛନ୍ନ ପ୍ୟାକେଟ୍

Options :

485584145825. 1
485584145826. 2
485584145827. 3
485584145828. 4

Question Number : 73 Question Id : 48558436458 Question Type : MCQ Option Shuffling : No Is Question Mandatory : No Calculator : None Response Time : N.A Think Time : N.A Minimum Instruction Time : 0

Correct Marks : 5 Wrong Marks : 1

Question Key Details :

Key	Value
Comprehension	MCQ

If any party is not satisfied by the order of District Commission, then appeal against such order can be made to state commission within a period of _____ days from the date of order.

1. Forty five
2. Thirty
3. Sixty
4. Forty

Options :

485584145829. 1
485584145830. 2
485584145831. 3
485584145832. 4

Question Number : 73 Question Id : 48558436458 Question Type : MCQ Option Shuffling : No Is Question Mandatory : No Calculator : None Response Time : N.A Think Time : N.A Minimum Instruction Time : 0

Correct Marks : 5 Wrong Marks : 1

Question Key Details :

Key	Value
Comprehension	MCQ

କୌଣସି ବ୍ୟକ୍ତି କିମ୍ବା ଦଳ ଯଦି କିଛି ଆୟୋଗ (District Commission)ର ଆଦେଶ/ନିର୍ଦ୍ଦେଶରେ ସମ୍ମତ ରୁହେ, ତେବେ ଆଦେଶ ବିରୁଦ୍ଧରେ ରାଜ୍ୟ ଆୟୋଗ (state commission) ପାଖରେ ଆଇନଗତ ଆବେଦନ (appeal) କରିବା ସମ୍ଭବ ଅଟେ, ଆଦେଶ ତାରିଖରୁ _____ ଦିନ ପର୍ଯ୍ୟନ୍ତ

1. 45

2. 30

3. 60

4. 40

Options :

485584145829. 1

485584145830. 2

485584145831. 3

485584145832. 4

Question Number : 74 Question Id : 48558436459 Question Type : MCQ Option Shuffling : No Is Question Mandatory : No Calculator : None Response Time : N.A Think Time : N.A Minimum Instruction Time : 0

Correct Marks : 5 Wrong Marks : 1

Question Key Details :

Key	Value
Comprehension	MCQ

Functions of Entrepreneurship in relation to economic Development do not include :-

1. Contribution to GDP

2. Capital Formation

3. Generation of Employment

4. Generation of Business opportunities only for same business

Options :

485584145833. 1

485584145834. 2

485584145835. 3

485584145836. 4

Question Number : 74 Question Id : 48558436459 Question Type : MCQ Option Shuffling : No Is Question Mandatory : No Calculator : None Response Time : N.A Think Time : N.A Minimum Instruction Time : 0

Correct Marks : 5 Wrong Marks : 1

Question Key Details :

Key	Value
Comprehension	MCQ

ଆର୍ଥିକ ବିକାଶ ସହିତ ଜ୍ୟୋତି (Entrepreneurship)ର କାର୍ଯ୍ୟକଳାପ ସଂରଚନା ନିମ୍ନୋକ୍ତ କେଉଁଟି ଅଙ୍ଗରେ ନୁହେଁ:-

1. ଜଡ଼ିପିତ୍ତ ଅବଦାନ
2. ପୁଞ୍ଜି ଗଠନ/ନିର୍ମାଣ (Capital Formation)
3. ଲୋଭରାଜ ଉତ୍ପାଦନ
4. ସେହି ବ୍ୟବସାୟ ପାଇଁ ବ୍ୟବସାୟ ସୁଯୋଗ ଉତ୍ପାଦନ

Options :

485584145833. 1
485584145834. 2
485584145835. 3
485584145836. 4

Question Number : 75 Question Id : 48558436460 Question Type : MCQ Option Shuffling : No Is Question Mandatory : No Calculator : None Response Time : N.A Think Time : N.A Minimum Instruction Time : 0

Correct Marks : 5 Wrong Marks : 1

Question Key Details :

Key	Value
Comprehension	MCQ

The person who combines all factors of production, who takes risk to earn profit is called entrepreneur.
Entrepreneur is _____.

1. Subject
2. Verb
3. Outcome
4. Process

Options :

485584145837. 1
485584145838. 2
485584145839. 3
485584145840. 4

Question Number : 75 Question Id : 48558436460 Question Type : MCQ Option Shuffling : No Is Question Mandatory : No Calculator : None Response Time : N.A Think Time : N.A Minimum Instruction Time : 0

Correct Marks : 5 Wrong Marks : 1

Question Key Details :

Key	Value
Comprehension	MCQ

ଗୋଟିଏ ବ୍ୟକ୍ତି ଯିଏକି ଯତୁ ଉତ୍ପାଦନ କାରକ ମାନକୁ (factors of production) ସଂଯୋଗ କରି ନାନ ଉତ୍ପାଦନ କରିବା ପାଇଁ ଲୋଭୁନ ନିଏ, ତାକୁ ଉଦ୍ୟୋଗୀ (Entrepreneur) କୁହାଯାଏ । ଉଦ୍ୟୋଗୀ ଗୋଟିଏ _____

1. ବିଷୟ (Subject)
2. କ୍ରିୟା (Verb)
3. ଫଳାଫଳ (Outcome)
4. ପ୍ରକ୍ରିୟା (Process)

Options :

- 485584145837. 1
- 485584145838. 2
- 485584145839. 3
- 485584145840. 4

Question Number : 76 Question Id : 48558436461 Question Type : MCQ Option Shuffling : No Is Question Mandatory : No Calculator : None Response Time : N.A Think Time : N.A Minimum Instruction Time : 0

Correct Marks : 5 Wrong Marks : 1

Question Key Details :

Key	Value
Comprehension	MCQ

Zicon Ltd. has recently set a target of becoming market leader in sale of smart TV. Arrange the steps in the process of planning which will follow after setting of targets :

- A. Identifying alternative courses of action
- B. Implementing the plan
- C. Evaluating alternative courses
- D. Selecting an alternative
- E. Developing premises

Choose the correct answer from the options given below :

1. E, A, C, D, B
2. E, C, D, B, A
3. B, C, E, A, D
4. E, A, B, D, C

Options :

- 485584145841. 1
- 485584145842. 2
- 485584145843. 3
- 485584145844. 4

Question Number : 76 Question Id : 48558436461 Question Type : MCQ Option Shuffling : No Is Question Mandatory : No Calculator : None Response Time : N.A Think Time : N.A Minimum Instruction Time : 0

Correct Marks : 5 Wrong Marks : 1

Question Key Details :

Key	Value
Comprehension	MCQ

ଜିକନ୍ ଲିମିଟେଡ୍ ଏବେ ସ୍ମାର୍ଟ ଚିଲି ବିକ୍ରୟରେ ସକାର ଅପ୍ରାଣୀ ହେବା ପାଇଁ ଲକ୍ଷ୍ୟ ରଖୁଛି । ଏହି ଲକ୍ଷ୍ୟ ସାଧନ କରିବା ପାଇଁ ଯେଉଁ ଚରଣ ଦେଇ ଯୋଜନାର ପ୍ରକ୍ରିୟା ଗଠି କରିବ, ସେହି କ୍ରମକୁ ସଜାଡ଼ି ଲେଖନ୍ତୁ:

- A. ବେଦଶିଳ୍ପ ଜାର୍ଯ୍ୟ ପଦ୍ଧତିକୁ ବିହତ କରିବା
- B. ଯୋଜନାକୁ କାର୍ଯ୍ୟକାରୀ କରିବା
- C. ବୈଦଶିଳ୍ପ ଜାର୍ଯ୍ୟ ପଦ୍ଧତିର ଗୁରୁତ୍ୱାଙ୍କନ କରିବା
- D. ବିକ୍ରୟର ଚୟନ
- E. ପ୍ରକ୍ଷ ସିକାଗ କରିବା (Developing premises)

ନିମ୍ନ ବିକଳ୍ପ ଗୁଡ଼ିକରୁ ସଠିକ୍ ଉତ୍ତରଗଣି ବିହତ କରନ୍ତୁ:

- 1. E, A, C, D, B
- 2. E, C, D, B, A
- 3. B, C, E, A, D
- 4. E, A, B, D, C

Options :

- 485584145841. 1
- 485584145842. 2
- 485584145843. 3
- 485584145844. 4

Question Number : 77 Question Id : 48558436462 Question Type : MCQ Option Shuffling : No Is Question Mandatory : No Calculator : None Response Time : N.A Think Time : N.A Minimum Instruction Time : 0

Correct Marks : 5 Wrong Marks : 1

Question Key Details :

Key	Value
Comprehension	MCQ

Arrange the correct sequence of steps in Organizing process.

- A. Identification and division of work
- B. Establishing authority and reporting relationships
- C. Assignment of Duties
- D. Departmentalization

Choose the correct answer from the options given below :

- 1. B, C, A, D
- 2. D, A, B, C
- 3. C, B, D, A
- 4. A, D, C, B

Options :

- 485584145845. 1
- 485584145846. 2
- 485584145847. 3
- 485584145848. 4

Question Number : 77 Question Id : 48558436462 Question Type : MCQ Option Shuffling : No Is Question Mandatory : No Calculator : None Response Time : N.A Think Time : N.A Minimum Instruction Time : 0

Correct Marks : 5 Wrong Marks : 1

Question Key Details :

Key	Value
Comprehension	MCQ

ସଙ୍ଗଠନ ବା ସଂସ୍ଥା ଗଠନ ପ୍ରକ୍ରିୟାରେ ଯେଉଁ ଚରଣ ଆଦେଶ ସମସ୍ତଙ୍କୁ ସଠିକ୍ କ୍ରମରେ ସଜାଡ଼ି ଲେଖାନ୍ତି ।

- A. କାର୍ଯ୍ୟର ବିଭାଜନ ଓ ବିଭାଜନ
- B. ପ୍ରଭୃତ୍ ସ୍ଥାପନା କରିବା ଏବଂ କର୍ତ୍ତୃପକ୍ଷକୁ ସୂଚନା ଦେବା
- C. କର୍ତ୍ତବ୍ୟ ଆବଣ୍ଟନ
- D. ବିଭାଗୀକରଣ/ବିଭାଗ ନିର୍ଦ୍ଧାରଣ

ନିମ୍ନ ବିକଳ୍ପ ଗୁଡ଼ିକରୁ ସଠିକ୍ ଉତ୍ତରଟି ଚିହ୍ନଟି କରନ୍ତୁ:

- 1. B, C, A, D
- 2. D, A, B, C
- 3. C, B, D, A
- 4. A, D, C, B

Options :

- 485584145845. 1
- 485584145846. 2
- 485584145847. 3
- 485584145848. 4

Question Number : 78 Question Id : 48558436463 Question Type : MCQ Option Shuffling : No Is Question Mandatory : No Calculator : None Response Time : N.A Think Time : N.A Minimum Instruction Time : 0 Correct Marks : 5 Wrong Marks : 1 Question Key Details :

Key	Value
Comprehension	MCQ

Mr. Prateek, the Production Manager of Zim Ltd. has selected the right workforce for his department. He decides the following steps which he would adopt in the process of staffing. Arrange them in correct sequence

- A. Performance Appraisal
- B. Compensation
- C. Placement and Orientation
- D. Promotion and Career Planning
- E. Training and development

Choose the correct answer from the options given below :

- 1. C, A, E, D, B
- 2. B, C, D, A, E
- 3. D, A, B, E, C
- 4. C, E, A, D, B

Options :

- 485584145849. 1
- 485584145850. 2
- 485584145851. 3
- 485584145852. 4

Question Number : 78 Question Id : 48558436463 Question Type : MCQ Option Shuffling : No Is Question Mandatory : No Calculator : None Response Time : N.A Think Time : N.A Minimum Instruction Time : 0 Correct Marks : 5 Wrong Marks : 1 Question Key Details :

Key	Value
Comprehension	MCQ

ଶ୍ରୀମାନ ପ୍ରତିକ୍ଷିତ ଯିଏକି କିମ୍ ବିନିଚେତର ଉତ୍ପାଦନ ପରିଚାଳକ, ସିଏ ତାଙ୍କ ବିଭାଗ ପାଇଁ ଉପଯୁକ୍ତ କାର୍ଯ୍ୟକର୍ତ୍ତା (work force) ଚୟନ କରୁଛନ୍ତି । ଉପଯୁକ୍ତ ସ୍ଥାନରେ କର୍ମଚାରୀକୁ ନିଯୋଗ କରିବା ପ୍ରକ୍ରିୟାରେ ସିଏ ନିମ୍ନୋକ୍ତ ବରଣ ମାନେ ଗ୍ରହଣ କରୁଛନ୍ତି । ସେଇ ବରଣମାନକୁ ସଠିକ୍ କ୍ରମରେ ସଜାଡ଼ି ଲେଖନ୍ତୁ ।

- A. କର୍ମବ୍ୟୟ ସମ୍ପାଦନ ମୂଲ୍ୟାଙ୍କନ
- B. ବରଣା ନିର୍ଣ୍ଣୟ (Compensation)
- C. ଉଚିତ ସ୍ଥାନରେ ନିଯୁକ୍ତି ଏବଂ କାର୍ଯ୍ୟ/କାର୍ଯ୍ୟାଳୟ ପରିବେଶରେ ଅଭ୍ୟାସ କରେଇବା ପ୍ରକ୍ରିୟା ।
- D. ପଦୋତ୍ତରଣ ଏବଂ ଦୁର୍ଭିଗତ କାର୍ଯ୍ୟ କ୍ରମର ଯୋଜନା
- E. ପ୍ରଶାସନ ଏବଂ ବିକାଶ

ନିମ୍ନ ବିକଳ୍ପ ଗୁଡ଼ିକରୁ ସଠିକ୍ ଉତ୍ତରଟି ଚିହ୍ନଟ କରନ୍ତୁ:

- 1. C, A, E, D, B
- 2. B, C, D, A, E
- 3. D, A, B, E, C
- 4. C, E, A, D, B

Options :

- 485584145849. 1
- 485584145850. 2
- 485584145851. 3
- 485584145852. 4

Question Number : 79 Question Id : 48558436464 Question Type : MCQ Option Shuffling : No Is Question Mandatory : No Calculator : None Response Time : N.A Think Time : N.A Minimum Instruction Time : 0

Correct Marks : 5 Wrong Marks : 1

Question Key Details :

Key	Value
Comprehension	MCQ

Arrange the steps of trading procedure of stock exchange in the correct sequence :

- A. Delivering the shares
- B. Placing an Order
- C. Opening a Demat Account
- D. Execution of the order
- E. Settlement of transaction

Choose the correct answer from the options given below :

- 1. C, A, B, D, E
- 2. C, B, D, A, E
- 3. B, A, D, C, E
- 4. B, C, A, E, D

Options :

- 485584145853. 1
- 485584145854. 2
- 485584145855. 3
- 485584145856. 4

Question Number : 79 Question Id : 48558436464 Question Type : MCQ Option Shuffling : No Is Question Mandatory : No Calculator : None Response Time : N.A Think Time : N.A Minimum Instruction Time : 0

Correct Marks : 5 Wrong Marks : 1

Question Key Details :

Key	Value
Comprehension	MCQ

ଷ୍ଟକ୍ ଏକ୍ସଚେଞ୍ଜର ଗଣିତ୍ୟ ପଦ୍ଧତି (trading procedure)ର ଚରଣମାନକୁ ଥିଠିକ୍ କ୍ରମରେ ସଜାଡ଼ି ଲେଖନ୍ତୁ

- A. ଅର୍ଥ ମାନଙ୍କ ପ୍ରଦାନ କରିବା (Delivering the shares)
- B. ଗୋଟିଏ ଅର୍ଡରକୁ ଉପସ୍ଥାପିତ କରିବା (Placing an Order)
- C. ଗୋଟିଏ ଡିମାଟ୍ (DEMAT) ଖାତା ଖୋଲିବା
- D. ଅର୍ଡର କ୍ରିୟାକ୍ରିତ କରିବା (Execution of the order)
- E. ଜାରଦାର ସମାଧାନ (Settlement of transaction)

ନିମ୍ନ ବିକଳ ସୂଚକରୁ ଉଠିକ୍ ଚରଣଟି ଚିହ୍ନଟ କରନ୍ତୁ:

- 1. C, A, B, D, E
- 2. C, B, D, A, E
- 3. B, A, D, A, E
- 4. B, C, A, E, D

Options :

- 485584145853. 1
- 485584145854. 2
- 485584145855. 3
- 485584145856. 4

Question Number : 80 Question Id : 48558436465 Question Type : MCQ Option Shuffling : No Is Question Mandatory : No Calculator : None Response Time : N.A Think Time : N.A Minimum Instruction Time : 0

Correct Marks : 5 Wrong Marks : 1

Question Key Details :

Key	Value
Comprehension	MCQ

Arrange the following in proper sequence.

- A. Critical Point control and management by exception
- B. Performance should be measured in an objective and reliable manner
- C. Standards are set in both Quantitative as well as Qualitative terms
- D. Reveal the deviation between actual and desired results
- E. Taking corrective action

Choose the correct answer from the options given below :

- 1. A, B, C, D, E
- 2. E, D, C, B, A
- 3. C, B, D, A, E
- 4. A, C, B, E, D

Options :

- 485584145857. 1
- 485584145858. 2
- 485584145859. 3
- 485584145860. 4

Question Number : 80 Question Id : 48558436465 Question Type : MCQ Option Shuffling : No Is Question Mandatory : No Calculator : None Response Time : N.A Think Time : N.A Minimum Instruction Time : 0

Correct Marks : 5 Wrong Marks : 1

Question Key Details :

Key	Value
Comprehension	MCQ

ନିମ୍ନୋକ୍ତକୁ ସଠିକ୍ କ୍ରମରେ ସଜାଡ଼ି ଲେଖନ୍ତୁ

- A. ନିଷ୍ପତ୍ତିମୂଳକ ବିନ୍ଦୁ ନିୟନ୍ତ୍ରଣ ଏବଂ ସୀମିତମ ବିଶିଷ୍ଟ ପରିଚାଳନା
- B. ଜର୍ଜରୀୟ ସମ୍ପାଦନକୁ ଗୋଟିଏ ବାସ୍ତବିକତା ଏବଂ ନିର୍ଭରଶୀଳ ଭାବରେ ମାପିବା
- C. ଉତ୍ତମ ସୁଶାସକ ଏବଂ ସଂଗ୍ୟାତକ ପଦମାନଙ୍କରେ ମାତ୍ରତଃ ନିର୍ଦ୍ଧାରଣ କରିବା
- D. ବାସ୍ତବିକ ଏବଂ ସାଞ୍ଚିତ ପଦାପନ ମଧ୍ୟରେ ତାରତମ୍ୟକୁ ଉଚ୍ଚାବର କରିବା
- E. କୃତ୍ରିମ ସୁଧାରକ କାର୍ଯ୍ୟ ଛାଡ଼ି ଦେବା

ନିମ୍ନ ବିକଳ ସୂଚକରୁ ସଠିକ୍ ଉତ୍ତରଟି ଚିହ୍ନଟ କରନ୍ତୁ:

- 1. A, B, C, D, E
- 2. E, D, C, B, A
- 3. C, B, D, A, E
- 4. A, C, B, E, D

Options :

- 485584145857. 1
- 485584145858. 2

485584145859. 3

485584145860. 4

Question Number : 81 Question Id : 48558436466 Question Type : MCQ Option Shuffling : No Is Question Mandatory : No Calculator : None Response Time : N.A Think Time : N.A Minimum Instruction Time : 0

Correct Marks : 5 Wrong Marks : 1

Question Key Details :

Key	Value
Comprehension	MCQ

Identify the correct combinations of Principles of Management.

- A. Division of work and motion study
- B. Equity and scalar chain
- C. Authority and Responsibility and Method Study
- D. Discipline and Order
- E. Initiative and Fatigue Study

Choose the correct answer from the options given below :

- 1. B and D Only
- 2. A and D Only
- 3. B and E Only
- 4. C and E Only

Options :

485584145861. 1

485584145862. 2

485584145863. 3

485584145864. 4

Question Number : 81 Question Id : 48558436466 Question Type : MCQ Option Shuffling : No Is Question Mandatory : No Calculator : None Response Time : N.A Think Time : N.A Minimum Instruction Time : 0

Correct Marks : 5 Wrong Marks : 1

Question Key Details :

Key	Value
Comprehension	MCQ

ପରିଚାୟନା ସିଦ୍ଧାନ୍ତ ମାନକ ସଠିକ୍ ସଂଯୋଗ ମାନକୁ ଚିହ୍ନଟ କରନ୍ତୁ

- A. କାର୍ଯ୍ୟକ୍ରମ ବିଭାଜନ ଏବଂ ଗତି ଅଧ୍ୟୟନ (motion study)
- B. ସମାନତା ଏବଂ ଦିଗବିହୀନ ଚକ୍ର (Equity and scalar chain)
- C. ପ୍ରଭୁତ୍ୱ/କର୍ତ୍ତୃତ୍ୱ ଏବଂ ଦାୟତ୍ୱ ଏବଂ ଚକ୍ର ଅଧ୍ୟୟନ
- D. ଶୁଦ୍ଧତା ଏବଂ ଆବେଶ
- E. ଆରମ୍ଭାପଣ ଏବଂ ଅଭିମତ ଅଧ୍ୟୟନ (Initiative and Fatigue Study)

ନିମ୍ନ ବିକଳ ଗୁଡ଼ିକରୁ ସଠିକ୍ ଉତ୍ତରଟି ଚିହ୍ନଟ କରନ୍ତୁ:

- 1. କେବଳ B ଏବଂ D
- 2. କେବଳ A ଏବଂ D
- 3. କେବଳ B ଏବଂ E
- 4. କେବଳ C ଏବଂ E

Options :

- 485584145861. 1
- 485584145862. 2
- 485584145863. 3
- 485584145864. 4

Question Number : 82 Question Id : 48558436467 Question Type : MCQ Option Shuffling : No Is Question Mandatory : No Calculator : None Response Time : N.A Think Time : N.A Minimum Instruction Time : 0

Correct Marks : 5 Wrong Marks : 1

Question Key Details :

Key	Value
Comprehension	MCQ

Which of the following are the sources of Recruitment for a newly set organization?

- A. Unskilled workers required for unskilled work provided by labour contractor
- B. Promotion to the higher post
- C. Websites such as www.naukri.com & jobstostreet etc.
- D. Recommendations of employees
- E. Recruitment from educational institutions

Choose the correct answer from the options given below :

- 1. B Only
- 2. A, C and D Only
- 3. A, C & E Only
- 4. E Only

Options :

- 485584145865. 1

485584145866. 2
485584145867. 3
485584145868. 4

Question Number : 82 Question Id : 48558436467 Question Type : MCQ Option Shuffling : No Is Question Mandatory : No Calculator : None Response Time : N.A Think Time : N.A Minimum Instruction Time : 0

Correct Marks : 5 Wrong Marks : 1

Question Key Details :

Key	Value
Comprehension	MCQ

କୋଟିଏ ନୂତନ ସଂସ୍ଥାନ ପାଇଁ ନିମ୍ନୋକ୍ତ କେଉଁଟି ନିଯୁକ୍ତିର ରାସ

- A. ଶ୍ରମିକ ତୁଳିକର୍ତ୍ତା (labour contractor) ଜାରି ଅଥବା କର୍ମୀ ପାଇଁ ଅଥବା ଶ୍ରମିକ ସୋରେସରୀ
- B. ଉଚ୍ଚ ପଦବୀକୁ ପଦୋତ୍ତରୀ
- C. Websites such as www.naukri.com & jobtostreet etc.
- D. କର୍ମଚାରୀମାନଙ୍କ ସୁପାରିଶ
- E. କାନ୍ଥର ସଂସ୍ଥାନ ମାଟକପାକୁ ନିଯୁକ୍ତି କରିବା

ନିମ୍ନ ବିକଳ ସୂଚକକୁ ସଠିକ୍ ଉତ୍ତରଟି ଚିହ୍ନଟ କରନ୍ତୁ:

- 1. B Only
- 2. A, C and D Only
- 3. A, C, D, & E Only
- 4. E Only

Options :

485584145865. 1
485584145866. 2
485584145867. 3
485584145868. 4

Question Number : 83 Question Id : 48558436468 Question Type : MCQ Option Shuffling : No Is Question Mandatory : No Calculator : None Response Time : N.A Think Time : N.A Minimum Instruction Time : 0

Correct Marks : 5 Wrong Marks : 1

Question Key Details :

Key	Value
Comprehension	MCQ

Which of the following statement/statements are not related with elements of Directing.

- A. Every manager in the organization supervise his/her subordinates
- B. It stimulates people to take up work voluntarily
- C. The process of influencing the behavior of people by making them strive voluntarily towards achievements of organizational goals
- D. Effective communication with subordinates
- E. Coordinating different functions of management

Choose the correct answer from the options given below :

- 1. E Only
- 2. A, B and D Only
- 3. D Only
- 4. B and C Only

Options :

- 485584145869. 1
- 485584145870. 2
- 485584145871. 3
- 485584145872. 4

Question Number : 83 Question Id : 48558436468 Question Type : MCQ Option Shuffling : No Is Question Mandatory : No Calculator : None Response Time : N.A Think Time : N.A Minimum Instruction Time : 0

Correct Marks : 5 Wrong Marks : 1

Question Key Details :

Key	Value
Comprehension	MCQ

ନିମ୍ନୋକ୍ତ କେଉଁ କଥାଟି/କଥାଗୁଡ଼ିକ ନିର୍ଦ୍ଦେଶନା ଉପାଦାନ ସଂଜ୍ଞାତ ନୁହେଁ

- A. ସଂସ୍ଥାନର ପ୍ରତିଟି ପରିଚାଳକ ତାଙ୍କ ଅଧିନସ୍ଥ ମାନଙ୍କୁ ପରିଦର୍ଶନ କରିବା (supervise)
- B. ଏହା ଲୋକଙ୍କୁ ସ୍ୱତନ୍ତ୍ରରେ କାର୍ଯ୍ୟ କରିବାକୁ ପ୍ରବର୍ତ୍ତାଇ ଥାଏ (stimulates)
- C. ସଂସ୍ଥାନର ଲାଭ ହାସିଲ ଉଦ୍ଦେଶ୍ୟରେ ଲୋକମାନଙ୍କୁ କର୍ତ୍ତୃତ୍ୱ ସ୍ୱତନ୍ତ୍ରରେ କାର୍ଯ୍ୟ କରିବାକୁ ଉତ୍ସାହ ଦେଖାଇବା କିମ୍ବା ତାହା ଆବଶ୍ୟକତାକୁ ପ୍ରତ୍ୟାକ୍ଷ କରିବା ପ୍ରକ୍ରିୟା
- D. ଅଧିନସ୍ଥମାନଙ୍କ ସହିତ ପ୍ରତ୍ୟାକ୍ଷ ସମ୍ପାଦନ କରିବା
- E. ପରିଚାଳନାର ବିଭିନ୍ନ କାର୍ଯ୍ୟକ୍ରମକୁ ସଂଯୋଗ କରିବା

ନିମ୍ନ ବିକଳ୍ପ ଗୁଡ଼ିକରୁ ସଠିକ୍ ଉତ୍ତରଟି ଚିହ୍ନଟ କରନ୍ତୁ:

- 1. E Only
- 2. A, B and D Only
- 3. D Only
- 4. B and C Only

Options :

485584145869. 1
485584145870. 2
485584145871. 3
485584145872. 4

Question Number : 84 Question Id : 48558436469 Question Type : MCQ Option Shuffling : No Is Question Mandatory : No Calculator : None Response Time : N.A Think Time : N.A Minimum Instruction Time : 0

Correct Marks : 5 Wrong Marks : 1

Question Key Details :

Key	Value
Comprehension	MCQ

Which of the following is not related with "Critical point of control" concept?

- A. Control should focus on key result areas
- B. KRA's can never be set as critical points
- C. It is very easy and economical to keep a check on each and every activity of organization
- D. If anything goes wrong at the critical points the entire organization suffers
- E. In manufacturing organization, an increase of 5% in labour cost may be more troublesome than a 15% increase in postal charges

Choose the correct answer from the options given below :

- 1. A Only
- 2. C & B Only
- 3. C Only
- 4. D & E Only

Options :

485584145873. 1
485584145874. 2
485584145875. 3
485584145876. 4

Question Number : 84 Question Id : 48558436469 Question Type : MCQ Option Shuffling : No Is Question Mandatory : No Calculator : None Response Time : N.A Think Time : N.A Minimum Instruction Time : 0

Correct Marks : 5 Wrong Marks : 1

Question Key Details :

Key	Value
Comprehension	MCQ

"ନିଷ୍ପତ୍ତିନିମ୍ନକ ବିନ୍ଦୁର ନିୟନ୍ତ୍ରଣ" ଧାରଣା ସହିତ ନିମ୍ନୋକ୍ତ କେଉଁଟି ସମ୍ପର୍କିତ ନୁହେଁ

- A. ପ୍ରମୁଖ ଫଳାଫଳ ସେକ୍ସନାଳକୁ ନିୟନ୍ତ୍ରଣ ଧାରଣାକୁ କରାଯାଇପାରେ
- B. KRA କଦାପି ନିଷ୍ପତ୍ତି ବିନ୍ଦୁ (critical points) ଭାବରେ ଗ୍ରହଣ କରାଯାଇ ପାରିବ ନାହିଁ
- C. ସଂସ୍ଥାନର ପ୍ରତ୍ୟେକ ନିୟନ୍ତ୍ରଣାବଳୀରେ ନିୟନ୍ତ୍ରଣ ରଖିବା ଅତି ସହଜ ଏବଂ ଅଳ୍ପ ଖର୍ଚ୍ଚ
- D. ନିଷ୍ପତ୍ତିନିମ୍ନକ ବିନ୍ଦୁରେ କିଛି ବି ତ୍ରୁଟି ଯଦି ରହିଯାଏ, ସମଗ୍ର ସଂସ୍ଥାନଟି ତାର କୁପ୍ରଭାବ ଭୋଗେ
- E. ଗୋଟିଏ ଚୟାବନକାରୀ ସଂସ୍ଥାନରେ ଶ୍ରମ ଖର୍ଚ୍ଚରେ 5% ବୃଦ୍ଧି, ତାଙ୍କ ଖର୍ଚ୍ଚରେ 15% ବୃଦ୍ଧିରୁ ଅଧିକ ବିପତ୍ତିନିମ୍ନକ

ନିମ୍ନ ବିକଳ୍ପ ଗୁଡ଼ିକରୁ ଯଦିକିଛି ଭଲଗଠି ଚିହ୍ନଟ କରନ୍ତୁ:

- 1. A Only
- 2. C & B Only
- 3. C Only
- 4. D & E Only

Options :

- 485584145873. 1
- 485584145874. 2
- 485584145875. 3
- 485584145876. 4

Question Number : 85 Question Id : 48558436470 Question Type : MCQ Option Shuffling : No Is Question Mandatory : No Calculator : None Response Time : N.A Think Time : N.A Minimum Instruction Time : 0

Correct Marks : 5 Wrong Marks : 1

Question Key Details :

Key	Value
Comprehension	MCQ

What are the aspects of feasibility analysis under Entrepreneurship Development ?

- A. Technical Aspect
- B. Economic Aspect
- C. Financial Aspect
- D. Commercial Aspect
- E. Political Aspect

Choose the correct answer from the options given below :

- 1. A, B and C Only
- 2. A, B, D and E Only
- 3. A and B Only
- 4. A, B, C and D Only

Options :

- 485584145877. 1
- 485584145878. 2

485584145879. 3
485584145880. 4

Question Number : 85 Question Id : 48558436470 Question Type : MCQ Option Shuffling : No Is Question Mandatory : No Calculator : None Response Time : N.A Think Time : N.A Minimum Instruction Time : 0

Correct Marks : 5 Wrong Marks : 1

Question Key Details :

Key	Value
Comprehension	MCQ

ଉଦ୍ୟୋଗିକ ବିକାଶ (Entrepreneurship Development) ଅବରୂପ ଚାରିପାରାରେ ବିଶ୍ଳେଷଣ (feasibility analysis) କରାଯାଇଥିବା ବିଷୟ ଚିହ୍ନଟ କରନ୍ତୁ :

- A. ଟେକ୍ନିକାଲ ବିଗ (ପ୍ରଯୋଗିକ ବିଗ)
- B. ଆର୍ଥିକ ବିଗ
- C. ବିଭିନ୍ନ ବିଗ
- D. ବାଣିଜ୍ୟିକ ବିଗ
- E. ରାଜନୈତିକ ବିଗ

ନିମ୍ନ ବିକଳ ସୂଚକଗୁଡ଼ିକରୁ ଉଚିତ୍ ଉତ୍ତରଟି ଚିହ୍ନଟ କରନ୍ତୁ :

- 1. A, B and C Only
- 2. A, B, D and E Only
- 3. A and B Only
- 4. A, B, C and D Only

Options :

485584145877. 1
485584145878. 2
485584145879. 3
485584145880. 4

Question Number : 86 Question Id : 48558436471 Question Type : MCQ Option Shuffling : No Is Question Mandatory : No Calculator : None Response Time : N.A Think Time : N.A Minimum Instruction Time : 0

Correct Marks : 5 Wrong Marks : 1

Question Key Details :

Key	Value
Comprehension	MCQ

Match List I with List II

LIST I		LIST II	
A.	Economic environment	I.	Legislations Passed
B.	Social environment	II.	Stock market Indices
C.	Technological environment	III.	New Methods and Techniques
D.	Legal environment	IV.	Traditions

Choose the correct answer from the options given below:

1. A-IV, B-III, C-II, D-I
2. A-II, B-IV, C-III, D-I
3. A-II, B-III, C-IV, D-I
4. A-II, B-I, C-III, D-IV

Options :

485584145881. 1
485584145882. 2
485584145883. 3
485584145884. 4

Question Number : 86 Question Id : 48558436471 Question Type : MCQ Option Shuffling : No Is Question Mandatory : No Calculator : None Response Time : N.A Think Time : N.A Minimum Instruction Time : 0

Correct Marks : 5 Wrong Marks : 1

Question Key Details :

Key	Value
Comprehension	MCQ

ତାଲିକା I ସହିତ ତାଲିକା IIକୁ ମିଳାନ୍ତୁ

ତାଲିକା I		ତାଲିକା II	
A.	ଆର୍ଥିକ ପରିବେଶ	I.	ଆଇନ ପାରିତ
B.	ସାମାଜିକ ପରିବେଶ	II.	ଷ୍ଟକ ମାର୍କେଟ ଉପା
C.	ପ୍ରଯୋଗିକା ପରିବେଶ (Technological environment)	III.	ନୂତନ ପଦ୍ଧତି ଏବଂ ଟେକ୍ନିକ୍ସ
D.	କ୍ଷତ୍ରୀୟ ପରିବେଶ	IV.	ପରମ୍ପରା

ନିମ୍ନ ବିକଳ୍ପ ଗୁଡ଼ିକରୁ ସଠିକ୍ ଉତ୍ତରଟି ଚିହ୍ନଟ କରନ୍ତୁ:

1. A-IV, B-III, C-II, D-I
2. A-II, B-IV, C-III, D-I
3. A-II, B-III, C-IV, D-I
4. A-II, B-I, C-III, D-IV

Options :

485584145881. 1

485584145882. 2
485584145883. 3
485584145884. 4

Question Number : 87 Question Id : 48558436472 Question Type : MCQ Option Shuffling : No Is Question Mandatory : No Calculator : None Response Time : N.A Think Time : N.A Minimum Instruction Time : 0

Correct Marks : 5 Wrong Marks : 1

Question Key Details :

Key	Value
Comprehension	MCQ

Match List I with List II

LIST I		LIST II	
A.	Objectives	I.	General Statements
B.	Strategy	II.	Routine steps
C.	Policy	III.	Comprehensive plan
D.	Procedure	IV.	End point of planning

Choose the correct answer from the options given below:

1. A-IV, B-III, C-II, D-I
2. A-IV, B-II, C-III, D-I
3. A-IV, B-I, C-III, D-II
4. A-IV, B-III, C-I, D-II

Options :

485584145885. 1
485584145886. 2
485584145887. 3
485584145888. 4

Question Number : 87 Question Id : 48558436472 Question Type : MCQ Option Shuffling : No Is Question Mandatory : No Calculator : None Response Time : N.A Think Time : N.A Minimum Instruction Time : 0

Correct Marks : 5 Wrong Marks : 1

Question Key Details :

Key	Value
Comprehension	MCQ

ତାଲିକା I ସହିତ ତାଲିକା IIକୁ ମିଳାନ୍ତୁ

ତାଲିକା I		ତାଲିକା II	
A.	ଉଦ୍ଦେଶ୍ୟ	I.	ସାଧାରଣ ଚକ୍ତି
B.	ଉତ୍ତରାପତ୍ତି	II.	ଶୈକ୍ଷଣିକ ପଦକ୍ଷେପ
C.	ମିତା	III.	ସ୍ୱାଧିକ ଯୋଜନା
D.	କାର୍ଯ୍ୟ ପଦ୍ଧତି	IV.	ଶ୍ରେଷ୍ଠ ବିନ୍ଦୁ ଯୋଜନା

ନିମ୍ନ ବିକଳ୍ପ ସୂଚକରୁ ସଠିକ୍ ଉତ୍ତରଟି ଚିହ୍ନଟ କରନ୍ତୁ:

1. A-IV, B-III, C-II, D-I
2. A-IV, B-II, C-III, D-I
3. A-IV, B-I, C-III, D-II
4. A-IV, B-III, C-I, D-II

Options :

485584145885. 1
 485584145886. 2
 485584145887. 3
 485584145888. 4

Question Number : 88 Question Id : 48558436473 Question Type : MCQ Option Shuffling : No Is Question Mandatory : No Calculator : None Response Time : N.A Think Time : N.A Minimum Instruction Time : 0

Correct Marks : 5 Wrong Marks : 1

Question Key Details :

Key	Value
Comprehension	MCQ

Match List I with List II

LIST I (Controlling Process)		LIST II (Related Concept)	
A.	Analysing deviations	I.	It demands managerial attention
B.	Taking corrective action	II.	It becomes easy when quantitative terms are used
C.	Comparison of standard with actuals	III.	To determine acceptable range of deviations
D.	Setting performance standards	IV.	Serves as benchmarks towards which an organization strives to work

Choose the correct answer from the options given below:

1. A-I, B-III, C-II, D-IV
2. A-III, B-I, C-II, D-IV
3. A-III, B-II, C-I, D-IV
4. A-IV, B-III, C-II, D-I

Options :

- 485584145889. 1
- 485584145890. 2
- 485584145891. 3
- 485584145892. 4

Question Number : 88 Question Id : 48558436473 Question Type : MCQ Option Shuffling : No Is Question Mandatory : No Calculator : None Response Time : N.A Think Time : N.A Minimum Instruction Time : 0

Correct Marks : 5 Wrong Marks : 1

Question Key Details :

Key	Value
Comprehension	MCQ

ତାଲିକା I ସହିତ ତାଲିକା IIକୁ ମିଳାନ୍ତୁ

ତାଲିକା I (ନିରୀକ୍ଷଣ ପ୍ରକ୍ରିୟା)		ତାଲିକା II (ସମ୍ପର୍କିତ ଧାରଣା)	
A.	ବ୍ୟତିରେକ କା ବିଦ୍ୟୁତ୍ ବିଦ୍ୟୁତ୍ପଣ	I.	ଏହା ପରିଚାଳନାତ୍ମକ ଦୃଷ୍ଟି ଦାଖଲରେ
B.	ଦୃଢ଼ ସୁଧାଘନ ପଦକ୍ଷେପ	II.	ସେତେବେଳେ ସଂଜ୍ଞାପତ ପଦ ବ୍ୟବହାର ହୋଇଥାଏ ଯାହା ସରଳ ହୋଇଥାଏ
C.	ନାସନକ୍ଷ ସହିତ ବାହ୍ୟବିଭାଗୀ ତୁଳନା	III.	ବିଦ୍ୟୁତ୍/ବ୍ୟତିରେକର ପ୍ରକ୍ରିୟା ଯୋଗ୍ୟ ପରିସର ଦୃଢ଼ କରିବା
D.	କର୍ତ୍ତବ୍ୟ ସମ୍ପାଦନ ନାସନକ୍ଷ ସ୍ଥାପନ	IV.	ଗୋଟିଏ ମାନବିକ ଉପରେ ଛାପିତ ହୋଇଥାଏ ଯାହାକୁ ସବୁ ସଂସ୍ଥାନମାନେ ହାସିଲ କରିବା ପାଇଁ କାର୍ଯ୍ୟ କରିବା

ନିମ୍ନ ବିକଳ୍ପ ଗୁଡ଼ିକରୁ ସଠିକ୍ ଉତ୍ତରଟି ଚିହ୍ନଟ କରନ୍ତୁ:

- 1. A-I, B-III, C-II, D-IV
- 2. A-III, B-I, C-II, D-IV
- 3. A-III, B-II, C-I, D-IV
- 4. A-IV, B-III, C-II, D-I

Options :

- 485584145889. 1
- 485584145890. 2
- 485584145891. 3
- 485584145892. 4

Question Number : 89 Question Id : 48558436474 Question Type : MCQ Option Shuffling : No Is Question Mandatory : No Calculator : None Response Time : N.A Think Time : N.A Minimum Instruction Time : 0

Correct Marks : 5 Wrong Marks : 1

Question Key Details :

Key	Value
Comprehension	MCQ

Match List I with List II

LIST I		LIST II	
A.	Interest Coverage Ratio	I.	Rate of return
B.	Choice of Technique	II.	Fixed Capital
C.	Credit Allowed	III.	Capital structure
D.	Capital budgeting decisions	IV.	Working Capital

Choose the correct answer from the options given below:

1. A-II, B-III, C-IV, D-I
2. A-III, B-II, C-I, D-IV
3. A-III, B-II, C-IV, D-I
4. A-II, B-IV, C-III, D-I

Options :

485584145893. 1
485584145894. 2
485584145895. 3
485584145896. 4

Question Number : 89 Question Id : 48558436474 Question Type : MCQ Option Shuffling : No Is Question Mandatory : No Calculator : None Response Time : N.A Think Time : N.A Minimum Instruction Time : 0

Correct Marks : 5 Wrong Marks : 1

Question Key Details :

Key	Value
Comprehension	MCQ

ତାରିକା I ସହିତ ତାରିକା IIକୁ ମିଳାନ୍ତୁ

ତାରିକା I		ତାରିକା II	
A.	ଆନ୍ତର୍ଦ୍ଦେଶୀୟ ବାଣିଜ୍ୟର ନିୟନ୍ତ୍ରଣ (Controlling insider Trading)	I.	ସେବି (SEBI)ର ନିୟନ୍ତ୍ରଣାଧୀନ ବାଣିଜ୍ୟ
B.	ନିର୍ଦ୍ଦେଶନାକୁ ପ୍ରତ୍ୟାଖ୍ୟା ଦେବା	II.	ସ୍ୱୟଂ ସହାୟତା
C.	ସ୍ୱାଧୀନତା/ଅନାଧିକାରୀଙ୍କୁ ପଞ୍ଜୀକୃତ କରିବା	III.	ସେବିର ସୁରକ୍ଷା ପ୍ରଦାନ ବାଣିଜ୍ୟକାରୀ
D.	କଟ୍ଟିନା କଟ୍ଟିନା (speculation)ର ସୁଯୋଗ ଦେବା	IV.	ସେବିର ବିକାଶଗୁଡ଼ିକ ବାଣିଜ୍ୟକାରୀ

ନିମ୍ନ ବିକଳ୍ପ ଗୁଡ଼ିକରୁ ଠିକ୍ ଉତ୍ତରଟି ଚିହ୍ନଟ କରନ୍ତୁ:

1. A-I, B-II, C-IV, D-III
2. A-III, B-IV, C-I, D-II
3. A-III, B-IV, C-I, D-II
4. A-II, B-IV, C-III, D-I

Options :

485584145893. 1
 485584145894. 2
 485584145895. 3
 485584145896. 4

Question Number : 90 Question Id : 48558436475 Question Type : MCQ Option Shuffling : No Is Question Mandatory : No Calculator : None Response Time : N.A Think Time : N.A Minimum Instruction Time : 0

Correct Marks : 5 Wrong Marks : 1

Question Key Details :

Key	Value
Comprehension	MCQ

Match List I with List II

LIST I		LIST II	
A.	Shopping Products	I.	Cigarettes, Ice cream, Medicines
B.	Speciality Products	II.	Raw materials, Engines, Lubricants
C.	Industrial Products	III.	Radio, Jewellery, Furniture
D.	Convenience Products	IV.	Salon, Restaurant, Boutique

Choose the correct answer from the options given below:

1. A-I, B-II, C-IV, D-III
2. A-III, B-I, C-II, D-IV
3. A-III, B-IV, C-II, D-I
4. A-IV, B-III, C-II, D-I

Options :

485584145897. 1
485584145898. 2
485584145899. 3
485584145900. 4

Question Number : 90 Question Id : 48558436475 Question Type : MCQ Option Shuffling : No Is Question Mandatory : No Calculator : None Response Time : N.A Think Time : N.A Minimum Instruction Time : 0

Correct Marks : 5 Wrong Marks : 1

Question Key Details :

Key	Value
Comprehension	MCQ

ତାଲିକା I ସହିତ ତାଲିକା IIକୁ ମିଳାନ୍ତୁ

ତାଲିକା I		ତାଲିକା II	
A.	ଉତ୍ପାଦ/ବହୁମାନଙ୍କ ବିଶିଷ୍ଟ	I.	ସିଗାରେଟ, ଆଇସକ୍ରିମ୍, ଔଷଧ
B.	ବିଶେଷ ଗୁଣ ଉତ୍ପାଦ	II.	କଞ୍ଚାମାଲ, ଇଞ୍ଜିନସି, ଲୁଗା
C.	ଶିଳ୍ପ ଉତ୍ପାଦ	III.	ବେତାର ପତ୍ର, ଘାଟ, ସର୍ବ ଆକୃଷଣ, ଫର୍ନିଚର୍
D.	ସୁବିଧାଜନକ ଉତ୍ପାଦ	IV.	ସେଲୁଲ୍, ଚୋଖୁଚୋଖି, ବୁଟିକ୍

ନିମ୍ନ ବିକଳ୍ପ ସୂଚକରୁ ସଠିକ୍ ଉତ୍ତରଟି ଚିହ୍ନଟ କରନ୍ତୁ:

1. A-I, B-II, C-IV, D-III
2. A-III, B-I, C-II, D-IV
3. A-III, B-IV, C-II, D-I
4. A-IV, B-III, C-II, D-I

Options :

485584145897. 1
485584145898. 2

485584145899. 3

485584145900. 4

Sub-Section Number : 2
Sub-Section Id : 4855842694
Question Shuffling Allowed : No
Is Section Default? : null

Question Number : 91 Question Id : 48558436476 Question Type : MCQ Option Shuffling : No Is Question Mandatory : No Calculator : None Response Time : N.A Think Time : N.A Minimum Instruction Time : 0

Correct Marks : 5 Wrong Marks : 1

Question Key Details :

Key	Value
Comprehension	Comp1

Mr. Rehan has done a diploma in Financial market and its participants. Recently he got a chance to present his knowledge and train students in a school. He told students about various money market instruments. He mentioned about an instrument which is issued by R.B.I on behalf of Central Government. He told students that Banks use a system to borrow money (an instrument) to manage their CRR i.e Cash Reserve Ratio. Later, he mentioned a short term self liquidating instrument like Bills of Exchange that can be used for arranging working capital. He also told students about an instrument that helps to mobilise large amounts of money in short period by commercial banks. Lastly, Mr. Rehan spoke about an instrument that works as a replacement towards bank borrowing for large credit-worthy companies, its maturity period is 15 days to one year.

"He mentioned about an Instrument which is issued by RBI on behalf of Central Government"

Identify the Money instrument to which the above given line is related to.

1. Call money
2. Commercial Papers
3. Treasury Bills
4. Commercial Bills

Options :

485584145901. 1

485584145902. 2

485584145903. 3

485584145904. 4

Question Number : 91 Question Id : 48558436476 Question Type : MCQ Option Shuffling : No Is Question Mandatory : No Calculator : None Response Time : N.A Think Time : N.A Minimum Instruction Time : 0

Correct Marks : 5 Wrong Marks : 1

Question Key Details :

Key	Value
Comprehension	Comp1

ଶ୍ରୀମାନ ରେହାନ ବିଭିନ୍ନ ବଜାର ଅଧ୍ୟୟନ ଏବଂ ବିଭିନ୍ନ ବଜାରର ସହଯୋଗୀଙ୍କ ବିଷୟରେ ବିଦ୍ୟୋଗ କରିଛନ୍ତି । ଅନୁଦିନ ପୂର୍ବେ ସେ ତାଙ୍କ ଜ୍ଞାନ ଉପସାଧନା କରିବା ପାଇଁ ଏବଂ ଗୋଟିଏ ବିଦ୍ୟାଳୟର ଛାତ୍ରମାନଙ୍କୁ ପ୍ରଶାସଣ କରିବା ପାଇଁ ସୁଯୋଗ ପାଇଥିଲେ । ସେ ଛାତ୍ରମାନଙ୍କୁ ମୁକ୍ତା ବଜାର ବିଷୟରେ ବିଭିନ୍ନ ଜ୍ଞାନ ଦେଲେ । ସେ ଆରବିଆର ଜାରା ଛାରି କରାଯାଇଥିବା ଗୋଟିଏ, କେନ୍ଦ୍ର ସରକାର ତରଫରୁ, ଇନଷ୍ଟ୍ରୁମେଣ୍ଟ ବିଷୟରେ ଉଲ୍ଲେଖ କଲେ । ସେ ଛାତ୍ରମାନଙ୍କୁ କହିଲେ ଯେ ବ୍ୟାଙ୍କମାନେ ତାଙ୍କ ନଗଦ ସଂରକ୍ଷଣ ଅନୁପାତ (ସିଆରଆର)କୁ ସମ୍ଭାଳିବା ପାଇଁ ଗୋଟାଏ ପ୍ରଣାଳୀକୁ ବ୍ୟବହାର କରି ରଖି ନେଇଥାନ୍ତି । ପରେ ସେ ଗୋଟିଏ ସ୍ୱପରିକ୍ଷୋତକ (Self liquidating) ଅଳ୍ପବର୍ତ୍ତୀ (Short term) ଇନଷ୍ଟ୍ରୁମେଣ୍ଟର ଉଲ୍ଲେଖ କଲେ ଯାହାକୁ ବିଲ୍ ଅଫ୍ ଏକ୍ସଚେଞ୍ଜ ବା ୟୁକ୍ସି, ଯାହାକି ଚଳନଶୀଳ ପୁଞ୍ଜି ପରିଚାଳନା କରିବା ପାଇଁ ବ୍ୟବହାର କରାଯାଇ ପାରିବ । ସେ ଛାତ୍ରମାନଙ୍କୁ ଆହୁରି ଗୋଟିଏ କଥା କହିଲେ ଯେ ବାଣିଜ୍ୟିକ ବ୍ୟାଙ୍କମାନେ ଗୋଟିଏ ଇନଷ୍ଟ୍ରୁମେଣ୍ଟ ମାଧ୍ୟମରେ ବୃହଦାକାର ଟଙ୍କା ସ୍ତରାବଧିରେ ଉଠେଇବା ସାହାଯ୍ୟ କରେ । ସର୍ବଶେଷରେ ଶ୍ରୀମାନ ରେହାନ ଗୋଟିଏ ଇନଷ୍ଟ୍ରୁମେଣ୍ଟ ବିଷୟରେ କହିଲେ ଯାହାକି ସମ୍ମାନଜନକ ରଖାପରିକ୍ଷାଧନ ବିକାଶ (credit worthy) କମ୍ପାନୀମାନଙ୍କ ପାଇଁ ବ୍ୟାଙ୍କ ରଖି ଦେବନରେ ଟଙ୍କା ଉଠେଇବା ପାଇଁ ଗୋଟିଏ ଇନଷ୍ଟ୍ରୁମେଣ୍ଟ ଅଛି, ଯାହାର ପରିପକ୍ୱ ନିର୍ଦ୍ଦିଷ୍ଟ (Time period) 15 ଦିନରୁ 1 ବର୍ଷ ହୋଇଥାଏ ।

ଉପରୋକ୍ତ ଅନୁରୂପତା ପଠନ କରି ପ୍ରଶ୍ନ ସଂଖ୍ୟା 46ରୁ 50 ପର୍ଯ୍ୟନ୍ତର ଉତ୍ତର ଦିଅନ୍ତୁ ।

"ସେ, କେନ୍ଦ୍ର ସରକାରଙ୍କ ତରଫରୁ ବ୍ୟବହୃତ ହେଉଥିବା ଗୋଟିଏ ଇନଷ୍ଟ୍ରୁମେଣ୍ଟ ବିଷୟରେ ଉଲ୍ଲେଖ କଲେ"

ଉପରୋକ୍ତ ବାକ୍ୟରେ ଦିଆଯାଇଥିବା ମୁକ୍ତା ଇନଷ୍ଟ୍ରୁମେଣ୍ଟକୁ (Money instrument) ଚିହ୍ନଟ କରନ୍ତୁ

1. Call money
2. Commercial Papers
3. Treasury Bills
4. Commercial Bills

Options :

- 485584145901. 1
- 485584145902. 2
- 485584145903. 3
- 485584145904. 4

Question Number : 92 Question Id : 48558436477 Question Type : MCQ Option Shuffling : No Is Question Mandatory : No Calculator : None Response Time : N.A Think Time : N.A Minimum Instruction Time : 0

Correct Marks : 5 Wrong Marks : 1

Question Key Details :

Key	Value
Comprehension	Compl

Mr. Rehan has done a diploma in Financial market and its participants. Recently he got a chance to present his knowledge and train students in a school. He told students about various money market instruments. He mentioned about an instrument which is issued by R.B.I on behalf of Central Government. He told students that Banks use a system to borrow money (an instrument) to manage their CRR i.e Cash Reserve Ratio. Later, he mentioned a short term self liquidating instrument like Bills of Exchange that can be used for arranging working capital. He also told students about an instrument that helps to mobilise large amounts of money in short period by commercial banks. Lastly, Mr. Rehan spoke about an instrument that works as a replacement towards bank borrowing for large credit-worthy companies, its maturity period is 15 days to one year.

He told that Banks use a system to borrow money (an instrument) to manage their cash Reserve Ratio.

Which security amongst money market Instrument is mentioned here.

1. Call money
2. Commercial papers
3. Treasury bills
4. Commercial Bills

Options :

- 485584145905. 1
- 485584145906. 2
- 485584145907. 3
- 485584145908. 4

Question Number : 92 Question Id : 48558436477 Question Type : MCQ Option Shuffling : No Is Question Mandatory : No Calculator : None Response Time : N.A Think Time : N.A Minimum Instruction Time : 0

Correct Marks : 5 Wrong Marks : 1

Question Key Details :

Key	Value
Comprehension	Comp1

ଶ୍ରୀମାନ ରେହାନ ବିଭିନ୍ନ ବଜାର ଅଧ୍ୟୟନ ଏବଂ ବିଭିନ୍ନ ବଜାରର ସହଯୋଗୀକ ବିଷୟରେ ଚିନ୍ତା କରୁଛନ୍ତି । ଅଳ୍ପଦିନ ପୂର୍ବେ ସେ ତାଙ୍କ ଜ୍ଞାନ ଉପସାଧନା କରିବା ପାଇଁ ଏବଂ ଗୋଟିଏ ବିଦ୍ୟାଳୟର ଛାତ୍ରମାନଙ୍କୁ ପ୍ରଶାସନ କରିବା ପାଇଁ ସୁଯୋଗ ପାଇଥିଲେ । ସେ ଛାତ୍ରମାନଙ୍କୁ ମୁକ୍ତ ବଜାର ବିଷୟରେ ବିଭିନ୍ନ ଜ୍ଞାନ ଦେଲେ । ସେ ଆରବିଆର ହାରା ହାରି କରାଯାଉଥିବା ଗୋଟିଏ, କେନ୍ଦ୍ର ସରକାର ତରଫରୁ, ଚଳସୁମ୍ମେଣ୍ଟ ବିଷୟରେ ଉଲ୍ଲେଖ କଲେ । ସେ ଛାତ୍ରମାନଙ୍କୁ କହିଲେ ଯେ ବ୍ୟାଙ୍କମାନେ ତାଙ୍କ ନଗଦ ସଂରକ୍ଷଣ ଅନୁପାତ (ସିଆରଆର)କୁ ସମାନ୍ତରା ପାଇଁ ଗୋଟିଏ ପ୍ରଣାଳୀକୁ ବ୍ୟବହାର କରି ରଖି ନେଇଥାନ୍ତି । ପରେ ସେ ଗୋଟିଏ ସ୍ୱପରିଣୋଡକ (Self liquidating) ଅଳ୍ପବୟ (Short term) ଚଳସୁମ୍ମେଣ୍ଟର ଉଲ୍ଲେଖ କଲେ ଯାହାକୁ ବିଲ୍ ଅଫ୍ ଏକ୍ସଚେଞ୍ଜ ବା ହୁଣ୍ଡି, ଯାହାକି ଚଳନଶୀଳ ପୁଞ୍ଜି ପରିଚାଳନା କରିବା ପାଇଁ ବ୍ୟବହାର କରାଯାଇ ପାରିବ । ସେ ଛାତ୍ରମାନଙ୍କୁ ଆହୁରି ଗୋଟିଏ କଥା କହିଲେ ଯେ ବାଣିଜ୍ୟିକ ବ୍ୟାଙ୍କମାନେ ଗୋଟିଏ ଚଳସୁମ୍ମେଣ୍ଟ ମାଧ୍ୟମରେ ବୃହଦାକାର ଟଙ୍କା ସଂଗ୍ରହରେ ଉଦ୍ଦେଶ୍ୟ ସାଧାଯ୍ୟ କରେ । ସର୍ବଶେଷରେ ଶ୍ରୀମାନ ରେହାନ ଗୋଟିଏ ଚଳସୁମ୍ମେଣ୍ଟ ବିଷୟରେ କହିଲେ ଯାହାକି ସମ୍ମାନଜନକ ରଣପରିଣୋଧନ ସିଦ୍ଧାନ୍ତ (credit worthy) କମ୍ପାନୀମାନଙ୍କ ପାଇଁ ବ୍ୟାଙ୍କ ରଣ ବଦଳରେ ଟଙ୍କା ଉଦ୍ଦେଶ୍ୟ ପାଇଁ ଗୋଟିଏ ଚଳସୁମ୍ମେଣ୍ଟ ଅଛି, ଯାହାର ପରିପକ୍ୱ ଚିତ୍ତିକ (Time period) 15 ଦିନରୁ 1 ବର୍ଷ ହୋଇପାଏ ।

ଉପରୋକ୍ତ ଅନୁଲେଖଟି ପଠନ କରି ପ୍ରଶ୍ନ ସଂଖ୍ୟା 46ରୁ 50 ପର୍ଯ୍ୟନ୍ତର ଉତ୍ତର ଦିଅନ୍ତୁ ।

ସେ କହିଲେ ଯେ ବ୍ୟାଙ୍କମାନେ ତାଙ୍କ ନଗଦ ସଂରକ୍ଷଣ ଅନୁପାତ (କେଏ ଚିତ୍ର ସଂରକ୍ଷଣ)କୁ ପରିଚାଳନା/ସମାଜିବା ପାଇଁ ଗୋଟିଏ ପ୍ରଣାଳୀ/ ଉପସ୍ଥାପନା ବ୍ୟବହାର କରିଥାନ୍ତି ।

ଉପରେ ସେ କେଉଁ ମନି ମାର୍କେଟ (ମୁଦ୍ରା ବଜାର) ଉପସ୍ଥାପନାକୁ ସିଦ୍ଧାନ୍ତ ଦିଅନ୍ତେ କୁହାଯାଇଛି

1. Call money
2. commercial papers
3. Treasury bills
4. Commercial Bills

Options :

485584145905. 1
485584145906. 2
485584145907. 3
485584145908. 4

Question Number : 93 Question Id : 48558436478 Question Type : MCQ Option Shuffling : No Is Question Mandatory : No Calculator : None Response Time : N.A Think Time : N.A Minimum Instruction Time : 0

Correct Marks : 5 Wrong Marks : 1

Question Key Details :

Key	Value
Comprehension	Compl

Mr. Rehan has done a diploma in Financial market and its participants. Recently he got a chance to present his knowledge and train students in a school. He told students about various money market instruments. He mentioned about an instrument which is issued by R.B.I on behalf of Central Government. He told students that Banks use a system to borrow money (an instrument) to manage their CRR i.e Cash Reserve Ratio. Later, he mentioned a short term self liquidating instrument like Bills of Exchange that can be used for arranging working capital. He also told students about an instrument that helps to mobilise large amounts of money in short period by commercial banks. Lastly, Mr. Rehan spoke about an instrument that works as a replacement towards bank borrowing for large credit-worthy companies, its maturity period is 15 days to one year.

"A short term self liquidating like Bills of Exchange than can be used for arranging working capital".

Which Money Market instrument, was Mr. Rehan referring to?

1. Call money
2. Certificate of Deposit
3. Commercial bills
4. Commercial papers

Options :

485584145909. 1
485584145910. 2
485584145911. 3

Question Number : 93 Question Id : 48558436478 Question Type : MCQ Option Shuffling : No Is Question Mandatory : No Calculator : None Response Time : N.A Think Time : N.A Minimum Instruction Time : 0

Correct Marks : 5 Wrong Marks : 1

Question Key Details :

Key	Value
Comprehension	Comp1

ଶ୍ରୀମାନ ରେହାନ ବିଭିନ୍ନ ବଜାର ଅଧିକାରୀଙ୍କ ସହିତ ବିଭିନ୍ନ ବଜାରର ସହଯୋଗୀଙ୍କ ବିଷୟରେ ବିଦ୍ୟୋଗ କରିଛନ୍ତି । ଅନୁଦିନ ପୂର୍ବେ ସେ ତାଙ୍କ ଜ୍ଞାନ ଉପସାଧନା କରିବା ପାଇଁ ଏକ ଗୋଟିଏ ବିଦ୍ୟାଳୟର ଛାତ୍ରମାନଙ୍କୁ ପ୍ରଶାସନ କରିବା ପାଇଁ ସୁଯୋଗ ପାଇଥିଲେ । ସେ ଛାତ୍ରମାନଙ୍କୁ ମୁକ୍ତା ବଜାର ବିଷୟରେ ବିଭିନ୍ନ ଜ୍ଞାନ ଦେଲେ । ସେ ଆରବିଆର ବାବା ଛାରି କରାଯାଉଥିବା ଗୋଟିଏ, କେନ୍ଦ୍ର ସରକାର ତରଫରୁ, ଉନସୁମେଣ୍ଟ ବିଷୟରେ ଉଲ୍ଲେଖ କଲେ । ସେ ଛାତ୍ରମାନଙ୍କୁ କହିଲେ ଯେ ବ୍ୟାଙ୍କମାନେ ତାଙ୍କ ନଗଦ ସଂରକ୍ଷଣ ଅନୁପାତ (ସିଆରଆର)କୁ ସମ୍ଭାଳିବା ପାଇଁ ଗୋଟିଏ ପ୍ରଣାଳୀକୁ ବ୍ୟବହାର କରି ରଖି ନେଇଥାନ୍ତି । ପରେ ସେ ଗୋଟିଏ ସ୍ୱପରିଶୋଧକ (Self liquidating) ଅଳ୍ପବଧୁ (Short term) ଉନସୁମେଣ୍ଟର ଉଲ୍ଲେଖ କଲେ ଯାହାକୁ ବିଲ୍ ଅଫ୍ ଏକ୍ସଚେଞ୍ଜ ବା ହୁଡ୍ଡି, ଯାହାକି ଉତ୍ପାଦନ ପୂର୍ଣ୍ଣ ପରିଚାଳନା କରିବା ପାଇଁ ବ୍ୟବହାର କରାଯାଉ ପାରିବ । ସେ ଛାତ୍ରମାନଙ୍କୁ ଆହୁରି ଗୋଟିଏ କଥା କହିଲେ ଯେ ବାଣିଜ୍ୟିକ ବ୍ୟାଙ୍କମାନେ ଗୋଟିଏ ଉନସୁମେଣ୍ଟ ମାଧ୍ୟମରେ ବୃହଦାକାର ତଳା ସୁଚ୍ଚାବଧୁରେ ଉଠେଇବା ସାହାଯ୍ୟ କରେ । ସର୍ବଶେଷରେ ଶ୍ରୀମାନ ରେହାନ ଗୋଟିଏ ଉନସୁମେଣ୍ଟ ବିଷୟରେ କହିଲେ ଯାହାକି ସମ୍ଭାବନାକର ରଖାପରିଶୋଧନ ସିଦ୍ଧାନ୍ତ (credit worthy) କମ୍ପାନୀମାନଙ୍କ ପାଇଁ ବ୍ୟାଙ୍କ ରଖି ଦେବନରେ ତଳା ଉଠେଇବା ପାଇଁ ଗୋଟିଏ ଉନସୁମେଣ୍ଟ ଅଛି, ଯାହାର ପରିପକ୍ୱ ନିର୍ଦ୍ଦିଷ୍ଟ (Time period) 15 ଦିନରୁ 1 ବର୍ଷ ହୋଇଥାଏ ।

ଉପରୋକ୍ତ ଅନୁରୂପତା ପଠନ କରି ପ୍ରଶ୍ନ ସଂଖ୍ୟା 46ରୁ 50 ପର୍ଯ୍ୟନ୍ତର ଉତ୍ତର ଦିଅନ୍ତୁ ।

"ଗୋଟିଏ ସୁଚ୍ଚାବଧୁ ସ୍ୱ ପରିଶୋଧକ ହୁଏ ପରିଚା (A short term self liquidating like bills of exchange) ଉନସୁମେଣ୍ଟ ଯାହାକି ଉତ୍ପାଦନ ପୂର୍ଣ୍ଣ (working capital) ବ୍ୟବହାର କରିବା ପାଇଁ ବ୍ୟବହାର କରାଯାଉ ପାରିବ ।

ଶ୍ରୀମାନ ରେହାନ ଉପରୋକ୍ତ ଉନସୁମେଣ୍ଟକୁ ଉଲ୍ଲେଖ କରୁଛନ୍ତି

1. Call money
2. Certificate of Deposit
3. Commercial bills
4. Commercial papers

Options :

- 485584145909. 1
- 485584145910. 2
- 485584145911. 3
- 485584145912. 4

Question Number : 94 Question Id : 48558436479 Question Type : MCQ Option Shuffling : No Is Question Mandatory : No Calculator : None Response Time : N.A Think Time : N.A Minimum Instruction Time : 0

Correct Marks : 5 Wrong Marks : 1

Question Key Details :

Key	Value
Comprehension	Comp1

Mr. Rehan has done a diploma in Financial market and its participants. Recently he got a chance to present his knowledge and train students in a school. He told students about various money market instruments. He mentioned about an instrument which is issued by R.B.I on behalf of Central Government. He told students that Banks use a system to borrow money (an instrument) to manage their CRR i.e Cash Reserve Ratio. Later, he mentioned a short term self liquidating instrument like Bills of Exchange that can be used for arranging working capital. He also told students about an instrument that helps to mobilise large amounts of money in short period by commercial banks. Lastly, Mr. Rehan spoke about an instrument that works as a replacement towards bank borrowing for large credit-worthy companies, its maturity period is 15 days to one year.

"An instrument that helps to mobilise large amounts of money in short period by commercial banks".

Identify the money market instrument stated above :

1. Certificate of Deposit
2. Call money
3. Commercial bills
4. Treasury bills

Options :

485584145913. 1
 485584145914. 2
 485584145915. 3
 485584145916. 4

Question Number : 94 Question Id : 48558436479 Question Type : MCQ Option Shuffling : No Is Question Mandatory : No Calculator : None Response Time : N.A Think Time : N.A Minimum Instruction Time : 0

Correct Marks : 5 Wrong Marks : 1

Question Key Details :

Key	Value
Comprehension	Compl

ଶ୍ରୀମାନ ରେହାନ ବିଭିନ୍ନ ବଜାର ଅଧ୍ୟୟନ ଏବଂ ବିଭିନ୍ନ ବଜାରର ସହଯୋଗୀକ ବିଷୟରେ ତିପ୍ପଣୀ କରିଛନ୍ତି । ଅନ୍ତର୍ଦ୍ଧିନ ପୂର୍ବେ ସେ ତାଙ୍କ ଜ୍ଞାନ ଉପସାଧନା କରିବା ପାଇଁ ଏବଂ ଗୋଟିଏ ବିଦ୍ୟାଳୟର ଛାତ୍ରମାନଙ୍କୁ ପ୍ରଶାସଣ କରିବା ପାଇଁ ସୁଯୋଗ ପାଇଥିଲେ । ସେ ଛାତ୍ରମାନଙ୍କୁ ମୁକ୍ତା ବଜାର ବିଷୟରେ ବିଭିନ୍ନ ଜ୍ଞାନ ଦେଲେ । ସେ ଆରବିଆର ଜାବା ଛାଡ଼ି କରାଯାଉଥିବା ଗୋଟିଏ, କେନ୍ଦ୍ର ସରକାର ତରଫରୁ, ଚଳସୁମ୍ମେଣ୍ଡ ବିଷୟରେ ଉଲ୍ଲେଖ କଲେ । ସେ ଛାତ୍ରମାନଙ୍କୁ କହିଲେ ଯେ ବ୍ୟାଙ୍କମାନେ ତାଙ୍କ ନଗଦ ସଂରକ୍ଷଣ ଅନୁପାତ (ସିଆରଆର)କୁ ସମାହିବା ପାଇଁ ଗୋଟିଏ ପ୍ରଣାଳୀକୁ ବ୍ୟବହାର କରି ରଖି ନେଇଥାନ୍ତି । ପରେ ସେ ଗୋଟିଏ ସ୍ୱପରିକ୍ଷାତକ (Self liquidating) ଅନ୍ତର୍ଦ୍ଧି (Short term) ଚଳସୁମ୍ମେଣ୍ଡର ଉଲ୍ଲେଖ କଲେ ଯାହାକୁ ବିଲ୍ ଅଫ୍ ଏକ୍ସଚେଞ୍ଜ ବା ହୁଣ୍ଡି, ଯାହାକି ତଳନିମ୍ନ ପୁଞ୍ଜି ପରିଚାଳନା କରିବା ପାଇଁ ବ୍ୟବହାର କରାଯାଉ ପାରିବ । ସେ ଛାତ୍ରମାନଙ୍କୁ ଆହୁରି ଗୋଟିଏ କଥା କହିଲେ ଯେ ବାଣିଜ୍ୟିକ ବ୍ୟାଙ୍କମାନେ ଗୋଟିଏ ଚଳସୁମ୍ମେଣ୍ଡ ମାଧ୍ୟମରେ ବୃହଦାକାର ଟଙ୍କା ସ୍ୱତ୍ତ୍ୱାବଧିରେ ଉଠେଇବା ସାହାଯ୍ୟ କରେ । ସର୍ବଶେଷରେ ଶ୍ରୀମାନ ରେହାନ ଗୋଟିଏ ଚଳସୁମ୍ମେଣ୍ଡ ବିଷୟରେ କହିଲେ ଯାହାକି ସମ୍ମାନଜନକ ରଖାପରିକ୍ଷାଧନ ସିଦ୍ଧାନ୍ତ (credit worthy) କମ୍ପାନୀମାନଙ୍କ ପାଇଁ ବ୍ୟାଙ୍କ ରଖି ବଦଳରେ ଟଙ୍କା ଉଠେଇବା ପାଇଁ ଗୋଟିଏ ଚଳସୁମ୍ମେଣ୍ଡ ଅଛି, ଯାହାର ପରିପକ୍ୱ ନିର୍ଦ୍ଦିଶ (Time period) 15 ଦିନରୁ 1 ବର୍ଷ ହୋଇପାଏ ।

ଉପରୋକ୍ତ ଅନୁଲେଖିତ ପଠନ କରି ପ୍ରଶ୍ନ ସଂଖ୍ୟା 46ରୁ 50 ପର୍ଯ୍ୟନ୍ତର ଉତ୍ତର ଦିଅନ୍ତୁ ।

"ବାଣିଜ୍ୟିକ ବ୍ୟବସାୟକୁ ସାହାଯ୍ୟ କରିବା ପାଇଁ ଗୋଟିଏ ଚଳସ୍ତ୍ରମେଣ୍ଡ ଯାହା ଦ୍ଵାରା ବୃହଦାକାର ଚଳା ସଂଗ୍ରହରେ ବ୍ୟବସ୍ଥା କରାଯାଇପାରିବ"

ଉପରୋକ୍ତ ପୁସ୍ତାକର ଚଳସ୍ତ୍ରମେଣ୍ଡକୁ ଚିହ୍ନଟ କରନ୍ତୁ

1. Certificate of Deposit
2. Call money
3. Commercial bills
4. Treasury bills

Options :

485584145913. 1
485584145914. 2
485584145915. 3
485584145916. 4

Question Number : 95 Question Id : 48558436480 Question Type : MCQ Option Shuffling : No Is Question Mandatory : No Calculator : None Response Time : N.A Think Time : N.A Minimum Instruction Time : 0

Correct Marks : 5 Wrong Marks : 1

Question Key Details :

Key	Value
Comprehension	Comp1

Mr. Rehan has done a diploma in Financial market and its participants. Recently he got a chance to present his knowledge and train students in a school. He told students about various money market instruments. He mentioned about an instrument which is issued by R.B.I on behalf of Central Government. He told students that Banks use a system to borrow money (an instrument) to manage their CRR i.e Cash Reserve Ratio. Later, he mentioned a short term self liquidating instrument like Bills of Exchange that can be used for arranging working capital. He also told students about an instrument that helps to mobilise large amounts of money in short period by commercial banks. Lastly, Mr. Rehan spoke about an instrument that works as a replacement towards bank borrowing for large credit-worthy companies, its maturity period is 15 days to one year.

"An instrument that works as a replacement towards bank borrowing for large Credit-worthy companies, its maturity period is 15 days to one year".

Identify the money market instrument stated in the above lines.

1. Call money
2. Commercial papers
3. Commercial bills
4. Certificate of Deposit

Options :

485584145917. 1
485584145918. 2
485584145919. 3
485584145920. 4

Question Number : 95 Question Id : 48558436480 Question Type : MCQ Option Shuffling : No Is Question Mandatory : No Calculator : None Response Time : N.A Think Time : N.A Minimum Instruction Time : 0 Correct Marks : 5 Wrong Marks : 1

Question Key Details :

Key	Value
Comprehension	Comp1

ଶ୍ରୀମାନ ରେହାନ ବିଭିନ୍ନ ବଜାର ଅଧିକାରୀଙ୍କ ସହିତ ବିଭିନ୍ନ ବଜାରର ସହଯୋଗୀଙ୍କ ବିଷୟରେ ଚିନ୍ତା କରୁଛନ୍ତି । ଅନୁମତି ପୂର୍ବକ ସେ ତାଙ୍କ ଜ୍ଞାନ ଉପଯୋଗ କରିବା ପାଇଁ ଏକ ଗୋଟିଏ ବିଦ୍ୟାଳୟର ଛାତ୍ରମାନଙ୍କୁ ପ୍ରଶାସନ କରିବା ପାଇଁ ସୁଯୋଗ ପାଇଥିଲେ । ସେ ଛାତ୍ରମାନଙ୍କୁ ମୁକ୍ତ ବଜାର ବିଷୟରେ ବିଭିନ୍ନ ଜ୍ଞାନ ଦେଲେ । ସେ ଆରବିଆର କାର୍ଯ୍ୟ କରି କରାଯାଉଥିବା ଗୋଟିଏ, କେନ୍ଦ୍ର ସରକାର ତରଫରୁ, ଉନସୁମେଣ୍ଟ ବିଷୟରେ ଉଲ୍ଲେଖ କଲେ । ସେ ଛାତ୍ରମାନଙ୍କୁ କହିଲେ ଯେ ବ୍ୟାଙ୍କମାନେ ତାଙ୍କ ନଗଦ ସଂରକ୍ଷଣ ଅନୁପାତ (ସିଆରଆର)କୁ ସମ୍ଭାଳିବା ପାଇଁ ଗୋଟିଏ ପ୍ରଣାଳୀକୁ ବ୍ୟବହାର କରି ଉଣ ନେଇଥାନ୍ତି । ପରେ ସେ ଗୋଟିଏ ସ୍ୱପରିଶୋଧକ (Self liquidating) ଅଳ୍ପବର୍ତ୍ତୀ (Short term) ଉନସୁମେଣ୍ଟର ଉଲ୍ଲେଖ କଲେ ଯାହାକୁ ବିଲ୍ ଅଫ୍ ଏକ୍ସଚେଞ୍ଜ ବା ଫୁଣ୍ଡି, ଯାହାକି ଉତ୍ପାଦନ ପୂର୍ଣ୍ଣ ପରିଚାଳନା କରିବା ପାଇଁ ବ୍ୟବହାର କରାଯାଉ ପାରିବ । ସେ ଛାତ୍ରମାନଙ୍କୁ ଆହୁରି ଗୋଟିଏ କଥା କହିଲେ ଯେ ବାଣିଜ୍ୟିକ ବ୍ୟାଙ୍କମାନେ ଗୋଟିଏ ଉନସୁମେଣ୍ଟ ମାଧ୍ୟମରେ ବୃହଦାକାର ତନା ସ୍ୱତ୍ତ୍ୱାବଧିରେ ଉଠେଇବା ସାହାଯ୍ୟ କରେ । ସର୍ବଶେଷରେ ଶ୍ରୀମାନ ରେହାନ ଗୋଟିଏ ଉନସୁମେଣ୍ଟ ବିଷୟରେ କହିଲେ ଯାହାକି ସମ୍ମାନଜନକ ଉପରିଶୋଧନ ସିଦ୍ଧାନ୍ତ (credit worthy) କମ୍ପାନୀମାନଙ୍କ ପାଇଁ ବ୍ୟାଙ୍କ ଉଣ ବଦଳରେ ତନା ଉଠେଇବା ପାଇଁ ଗୋଟିଏ ଉନସୁମେଣ୍ଟ ଅଛି, ଯାହାର ପରିପକ୍ୱ ନିର୍ଦ୍ଦିଷ୍ଟ (Time period) 15 ଦିନରୁ 1 ବର୍ଷ ହୋଇଥାଏ ।

ଉପରୋକ୍ତ ଅନୁଲେଖିତ ପଠନ କରି ପ୍ରଶ୍ନ ସଂଖ୍ୟା 46ରୁ 50 ପର୍ଯ୍ୟନ୍ତର ଉତ୍ତର ଦିଅନ୍ତୁ ।

"ସମ୍ମାନଜନକ ଉପରିଶୋଧନ ସିଦ୍ଧାନ୍ତ ରଖୁଥିବା କମ୍ପାନୀମାନଙ୍କ ପାଇଁ ବ୍ୟାଙ୍କ ଉଣ ବଦଳରେ ତନା ଉଠେଇବା ପାଇଁ ଗୋଟିଏ ଉନସୁମେଣ୍ଟ ରହିଛି, ଯାହାର ପରିପକ୍ୱ ନିର୍ଦ୍ଦିଷ୍ଟ/ନିୟାନ୍ତା (maturity period) 15 ଦିନରୁ 1 ବର୍ଷ ହୋଇଥାଏ ।"

ଉପରୋକ୍ତ ଉପଲକ୍ଷରେ କେଉଁ ମୁକ୍ତ ବଜାର ଉନସୁମେଣ୍ଟ ବାବଦରେ ଉଲ୍ଲେଖ ହୋଇଛି, ତାହାକୁ ଚିହ୍ନଟ କରନ୍ତୁ

1. Call money
2. Commercial papers
3. Commercial bills
4. Certificate of Deposit

Options :

- 485584145917. 1
- 485584145918. 2
- 485584145919. 3
- 485584145920. 4

Sub-Section Number : 3
Sub-Section Id : 4855842695
Question Shuffling Allowed : No
Is Section Default? : null

Question Number : 96 Question Id : 48558436481 Question Type : MCQ Option Shuffling : No Is Question Mandatory : No Calculator : None Response Time : N.A Think Time : N.A Minimum Instruction Time : 0 Correct Marks : 5 Wrong Marks : 1

Question Key Details :

Key	Value
Comprehension	Comp2

Safex Ltd is a company manufacturing masks. The newly appointed marketing manager of the firm has taken 'Covid Pandemic' as an opportunity to increase sales. He used a combination of tools to achieve its communication objective. He constituted 4 teams for designing these tools.

Team 1 :- The tool used by them was an impersonal form of communication which was paid for.

Team 2:- The tool used by them involves oral presentation of message in the form of conversation with one or more prospective customers for the purpose of making sales

Team 3:- This team used short-term incentives which were designed to encourage the buyers to make immediate purchase.

Team 4:- This team used a non-personal form of communication which was non-paid.

All the teams successfully designed their tools and achieved their desired results.

The variable of marketing mix discussed in the above case is _____

1. Product mix
2. Place mix
3. Price mix
4. Promotion mix

Options :

- 485584145921. 1
- 485584145922. 2
- 485584145923. 3
- 485584145924. 4

Question Number : 96 Question Id : 48558436481 Question Type : MCQ Option Shuffling : No Is Question Mandatory : No Calculator : None Response Time : N.A Think Time : N.A Minimum Instruction Time : 0

Correct Marks : 5 Wrong Marks : 1

Question Key Details :

Key	Value
Comprehension	Comp2

ନିମ୍ନ ଅନୁଲେଖକଙ୍କୁ ପଠନ କରି ପ୍ରଶ୍ନ ସଂଖ୍ୟା 46ରୁ 50ର ଉତ୍ତର ଦିଅନ୍ତୁ ।

କେମ୍ବେକ୍ସ ଲିମିଟେଡ୍ ଗୋଟିଏ କମ୍ପାନୀ ଯାହା ମୁଖା (Mask) ତିଆରି କରେ । ନୂତନ ନିୟୁତ୍ତି ପାତ୍ରାୟବା ବିପଣନ ପରିଚାଳକ (marketing manager) କୋଭିଡ୍ ମହାମାରୀର ସୁଯୋଗ ନେଇ ବିକ୍ରିୟ ବୃଦ୍ଧି କରିବା ପାଇଁ କାର୍ଯ୍ୟ ଆରମ୍ଭ କରିଛି । ସେ ଥିଆର ଉଦ୍ଦେଶ୍ୟକୁ ସାଧିବା ପାଇଁ କେତେ ପୁସ୍ତିକ ବିପଣନ କୌଶଳକୁ ସୁଗ୍ରୁ କରି ବ୍ୟବହାର କଲେ । ସେ ଏହି କୌଶଳ ମାନକୁ ଗଠନ କରିବା ପାଇଁ (designing these tools), 4ଟି ଦଳର ଗଠନ କଲେ ।

ଦଳ 1 - ଏମାନଙ୍କ ଦ୍ଵାରା ବ୍ୟବହୃତ ହୋଇଥିବା କୌଶଳଟି ଅବ୍ୟକ୍ତିଗତ ସଞ୍ଚାର ଥିଲା ଯାହାକି ମୂଲ୍ୟ ଦିଆଯାଇଥିଲା ।

ଦଳ 2 - ଏମାନଙ୍କ ଦ୍ଵାରା ବ୍ୟବହୃତ ହୋଇଥିବା କୌଶଳଟି, ବିକ୍ରୟ କରିବା ଉଦ୍ଦେଶ୍ୟ ପାଇଁ ଗୋଟିଏ ବିପ୍ଳା ଚତୋଧୂର ଉଦ୍ଦେଶ୍ୟରେ ଆଖା କରାଯାଇଥିବା ଉପଗୋଳା ମାନଙ୍କ ସହିତ ମୌଖିକ ସମ୍ବାଦରେ ବାର୍ତ୍ତାର ଆଦାନ ପ୍ରଦାନ କରାଯାଇଥିଲା ।

ଦଳ 3 - ଏହି ଦଳ ସ୍ଵସ୍ଠାବଧୀ ପ୍ରୋଞ୍ଜାକ୍ସନ ରାଖୀକୁ ବ୍ୟବହାର କଲେ ଯାହାର ଉଦ୍ଦେଶ୍ୟ ଥିଲା କ୍ରେତାମାନଙ୍କୁ ତୁରନ୍ତ ବିଶିଷ୍ଟ ପାଇଁ ଗଠାଣିତ କରିବ ।

ଦଳ 4 - ଏମାନଙ୍କ ଦ୍ଵାରା ବ୍ୟବହୃତ ହୋଇଥିବା କୌଶଳଟି ଅବ୍ୟକ୍ତିଗତ ସଞ୍ଚାର ମାଧ୍ୟମ ଯାହାର ମୂଲ୍ୟ ଦିଆଯାଇନଥିଲା ।

ପରିବର୍ତ୍ତନଶୀଳ ବିପଣନ ମିଶ୍ରଣ ବିଷୟରେ ଏହି ଅନୁଲେଖରେ _____ ଆଲୋଚନା ହୋଇଛି

1. ଉତ୍ପାଦ ମିଶ୍ରଣ
2. ଶ୍ରୀମ ମିଶ୍ରଣ
3. ମୂଲ୍ୟ ମିଶ୍ରଣ
4. ପ୍ରଚାର ମାଧ୍ୟମରେ ଉତ୍ପାଦର ଗ୍ରହଣ

Options :

- 485584145921. 1
- 485584145922. 2
- 485584145923. 3
- 485584145924. 4

Question Number : 97 Question Id : 48558436482 Question Type : MCQ Option Shuffling : No Is Question Mandatory : No Calculator : None Response Time : N.A Think Time : N.A Minimum Instruction Time : 0

Correct Marks : 5 Wrong Marks : 1

Question Key Details :

Key	Value
Comprehension	Comp2

Safex Ltd is a company manufacturing masks. The newly appointed marketing manager of the firm has taken 'Covid Pandemic' as an opportunity to increase sales. He used a combination of tools to achieve its communication objective. He constituted 4 teams for designing these tools.

Team 1 :- The tool used by them was an impersonal form of communication which was paid for.

Team 2:- The tool used by them involves oral presentation of message in the form of conversation with one or more prospective customers for the purpose of making sales

Team 3:- This team used short-term incentives which were designed to encourage the buyers to make immediate purchase.

Team 4:- This team used a non-personal form of communication which was non-paid.

All the teams successfully designed their tools and achieved their desired results.

The tool used by Team 3 was _____

1. Public relations
2. Sales promotion
3. Publicity
4. Branding

Options :

- 485584145925. 1
- 485584145926. 2
- 485584145927. 3
- 485584145928. 4

Question Number : 97 Question Id : 48558436482 Question Type : MCQ Option Shuffling : No Is Question Mandatory : No Calculator : None Response Time : N.A Think Time : N.A Minimum Instruction Time : 0

Correct Marks : 5 Wrong Marks : 1

Question Key Details :

Key	Value
Comprehension	Comp2

ନିମ୍ନ ଅନୁଚ୍ଛେଦଗୁଡ଼ିକୁ ପଠନ କରି ପ୍ରଶ୍ନ ସଂଖ୍ୟା 46ରୁ 50ର ଉତ୍ତର ଦିଅନ୍ତୁ ।

କେମ୍ପେସ୍ ଲିମିଟେଡ୍ ଗୋଟିଏ କମ୍ପାନୀ ଯାହା ମୁଖା (Mask) ତିଆରି କରେ । ନୂତନ ନିୟୁତ୍ତି ପାତ୍ରାୟବା ବିପଣନ ପରିଚାଳକ (marketing manager) କୋଭିଡ୍ ମହାମାରୀର ସୁଯୋଗ ନେଇ ବିକ୍ରିୟ ବୃଦ୍ଧି କରିବା ପାଇଁ କାର୍ଯ୍ୟ ଆରମ୍ଭ କରିଛି । ସେ ଥିଆର ଉଦ୍ଦେଶ୍ୟକୁ ସାଧିବା କରିବା ପାଇଁ କେତେ ଗୁଡ଼ିକ ବିପଣନ ଚୋରଣକୁ ଯୁଗ୍ମ କରି ବ୍ୟବହାର କଲେ । ସେ ଏହି ଚୋରଣ ମାନକୁ ଗଠନ କରିବା ପାଇଁ (designing these tools), 4ଟି ସମ୍ଭବ ଉପକ୍ରମ କଲେ ।

ଦକ 1 - ଏମାନଙ୍କ ଦ୍ଵାରା ବ୍ୟବହୃତ ହୋଇଥିବା ଚୋରଣଟି ଅବ୍ୟକ୍ତିଗତ ସଞ୍ଚାର ଥିଲା ଯାହାକି ମୂଲ୍ୟ ଦିଆଯାଇଥିଲା ।

ଦକ 2 - ଏମାନଙ୍କ ଦ୍ଵାରା ବ୍ୟବହୃତ ହୋଇଥିବା ଚୋରଣଟି, ବିକ୍ରୟ କରିବା ଉଦ୍ଦେଶ୍ୟ ପାଇଁ ଗୋଟିଏ ବିପ୍ଳା ଚତୋଧୂର ଉଦ୍ଦେଶ୍ୟରେ ଆଣି କରାଯାଇଥିବା ଉପଗୋଳା ମାନଙ୍କ ସହିତ ମୌଖିକ ସମ୍ବାଦରେ ବାର୍ତ୍ତା ଆଦାନ ପ୍ରଦାନ କରାଯାଇଥିଲା ।

ଦକ 3 - ଏହି ଦକ ସ୍ଵଚ୍ଛାବଧୀ ପ୍ରୋଞ୍ଚାହନ ରାଖାକୁ ବ୍ୟବହାର କଲେ ଯାହାର ଉଦ୍ଦେଶ୍ୟ ଥିଲା ଶ୍ରେତାମାନଙ୍କୁ ତୁରନ୍ତ ବିଶିଷ୍ଟ ପାଇଁ ଗଠାଣିତ କରିତ ।

ଦକ 4 - ଏମାନଙ୍କ ଦ୍ଵାରା ବ୍ୟବହୃତ ହୋଇଥିବା ଚୋରଣଟି ଅବ୍ୟକ୍ତିଗତ ସଞ୍ଚାର ମାଧ୍ୟମ ଯାହାର ମୂଲ୍ୟ ଦିଆଯାଇନଥିଲା ।

ଚୋରଣ ଯାହା ଦକ-3 ପାଇଁ ବ୍ୟବହୃତ ହୁଏ

1. ଚଳ ସମ୍ପର୍କ
2. ବିକ୍ରି ବିତାଣ
3. ପ୍ରକାଶିତ
4. ବ୍ରାଉ

Options :

485584145925. 1
485584145926. 2
485584145927. 3
485584145928. 4

Question Number : 98 Question Id : 48558436483 Question Type : MCQ Option Shuffling : No Is Question Mandatory : No Calculator : None Response Time : N.A Think Time : N.A Minimum Instruction Time : 0

Correct Marks : 5 Wrong Marks : 1

Question Key Details :

Key	Value
Comprehension	Comp2

Safex Ltd is a company manufacturing masks. The newly appointed marketing manager of the firm has taken 'Covid Pandemic' as an opportunity to increase sales. He used a combination of tools to achieve its communication objective. He constituted 4 teams for designing these tools.

Team 1 :- The tool used by them was an impersonal form of communication which was paid for.

Team 2:- The tool used by them involves oral presentation of message in the form of conversation with one or more prospective customers for the purpose of making sales

Team 3:- This team used short-term incentives which were designed to encourage the buyers to make immediate purchase.

Team 4:- This team used a non-personal form of communication which was non-paid.

All the teams successfully designed their tools and achieved their desired results.

The tool used by Team 4 is _____

1. Packaging
2. Advertising
3. Publicity
4. Sales promotion

Options :

- 485584145929. 1
- 485584145930. 2
- 485584145931. 3
- 485584145932. 4

Question Number : 98 Question Id : 48558436483 Question Type : MCQ Option Shuffling : No Is Question Mandatory : No Calculator : None Response Time : N.A Think Time : N.A Minimum Instruction Time : 0

Correct Marks : 5 Wrong Marks : 1

Question Key Details :

Key	Value
Comprehension	Comp2

ନିମ୍ନ ଅନୁଚ୍ଛେଦଗୁଡ଼ିକୁ ପଠନ କରି ପ୍ରଶ୍ନ ସଂଖ୍ୟା 46ରୁ 50ର ଉତ୍ତର ଦିଅନ୍ତୁ ।

କେମ୍ପେସ୍ ଲିମିଟେଡ୍ ଗୋଟିଏ କମ୍ପାନୀ ଯାହା ମୁଖା (Mask) ତିଆରି କରେ । ନୂତନ ନିୟୁତ୍ତି ପାତ୍ରାୟା ବିପଣନ ପରିଚାଳକ (marketing manager) କୋଭିଡ୍ ମହାମାରୀର ସୁଯୋଗ ନେଇ ବିକ୍ରିୟ ବୃଦ୍ଧି କରିବା ପାଇଁ କାର୍ଯ୍ୟ ଆରମ୍ଭ କରିଛି । ସେ ଥିଆର ଉଦ୍ଦେଶ୍ୟକୁ ସାଧିବା ପାଇଁ କେତେ ଗୁଡ଼ିକ ବିପଣନ କୌଶଳକୁ ଯୁଗ୍ମ କରି ବ୍ୟବହାର କଲେ । ସେ ଏହି କୌଶଳ ମାନକୁ ଗଠନ କରିବା ପାଇଁ (designing these tools), 4ଟି ସମ୍ପର୍କ ଗଠନ କଲେ ।

ଦକ 1 - ଏମାନଙ୍କ ଦ୍ଵାରା ବ୍ୟବହୃତ ହୋଇଥିବା କୌଶଳଟି ଅବ୍ୟକ୍ତିଗତ ସଞ୍ଚାର ଥିଲା ଯାହାକି ମୂଲ୍ୟ ଦିଆଯାଇଥିଲା ।

ଦକ 2 - ଏମାନଙ୍କ ଦ୍ଵାରା ବ୍ୟବହୃତ ହୋଇଥିବା କୌଶଳଟି, ବିକ୍ରୟ କରିବା ଉଦ୍ଦେଶ୍ୟ ପାଇଁ ଗୋଟିଏ ବିପ୍ଳା ଚତୋଧୂର ଉଦ୍ଦେଶ୍ୟରେ ଆଖା କରାଯାଇଥିବା ଉପଗୋଳା ମାନଙ୍କ ସହିତ ମୌଖିକ ସମ୍ପାଦରେ ବାର୍ତ୍ତା ଆଦାନ ପ୍ରଦାନ କରାଯାଇଥିଲା ।

ଦକ 3 - ଏହି ଦକ ସ୍ଵତ୍ଵାବଧୀ ପ୍ରୋଫାହନ ରାଖୀକୁ ବ୍ୟବହାର କଲେ ଯାହାର ଉଦ୍ଦେଶ୍ୟ ଥିଲା କ୍ରେତାମାନଙ୍କୁ ତୁରନ୍ତ ବିଶିଷ୍ଟ ପାଇଁ ଗଠାଣିତ କରିତ ।

ଦକ 4 - ଏମାନଙ୍କ ଦ୍ଵାରା ବ୍ୟବହୃତ ହୋଇଥିବା କୌଶଳଟି ଅବ୍ୟକ୍ତିଗତ ସଞ୍ଚାର ମାଧ୍ୟମ ଯାହାର ମୂଲ୍ୟ ଦିଆଯାଇନଥିଲା ।

ଦକ-4 ଦ୍ଵାରା ବ୍ୟବହୃତ ହୋଇଥିବା କୌଶଳଟି (Tool) _____ ଅଟେ

1. ପ୍ୟାକେଜ
2. ବିକ୍ଷାପନ
3. ପ୍ରଚାର କରିବା
4. ବିକ୍ରୟ ବିକାଶ/ପ୍ରୋଫାହନ

Options :

- 485584145929. 1
- 485584145930. 2
- 485584145931. 3
- 485584145932. 4

Question Number : 99 Question Id : 48558436484 Question Type : MCQ Option Shuffling : No Is Question Mandatory : No Calculator : None Response Time : N.A Think Time : N.A Minimum Instruction Time : 0

Correct Marks : 5 Wrong Marks : 1

Question Key Details :

Key	Value
Comprehension	Comp2

Safex Ltd is a company manufacturing masks. The newly appointed marketing manager of the firm has taken 'Covid Pandemic' as an opportunity to increase sales. He used a combination of tools to achieve its communication objective. He constituted 4 teams for designing these tools.

Team 1 :- The tool used by them was an impersonal form of communication which was paid for.

Team 2:- The tool used by them involves oral presentation of message in the form of conversation with one or more prospective customers for the purpose of making sales

Team 3:- This team used short-term incentives which were designed to encourage the buyers to make immediate purchase.

Team 4:- This team used a non-personal form of communication which was non-paid.

All the teams successfully designed their tools and achieved their desired results.

The tool used by Team 1 is _____

1. Advertising
2. Public relations
3. Publicity
4. Personal selling

Options :

- 485584145933. 1
- 485584145934. 2
- 485584145935. 3
- 485584145936. 4

Question Number : 99 Question Id : 48558436484 Question Type : MCQ Option Shuffling : No Is Question Mandatory : No Calculator : None Response Time : N.A Think Time : N.A Minimum Instruction Time : 0

Correct Marks : 5 Wrong Marks : 1

Question Key Details :

Key	Value
Comprehension	Comp2

ନିମ୍ନ ଅନୁଚ୍ଛେଦଗୁଡ଼ିକୁ ପଠନ କରି ପ୍ରଶ୍ନ ସଂଖ୍ୟା 46ରୁ 50ର ଉତ୍ତର ଦିଅନ୍ତୁ ।

କେମ୍ବେକ୍ସ ଲିମିଟେଡ୍ ଗୋଟିଏ କମ୍ପାନୀ ଯାହା ମୁଖା (Mask) ତିଆରି କରେ । ନୂତନ ନିୟୁତ୍ତି ପାତ୍ରାୟବା ବିପଣନ ପରିଚାଳକ (marketing manager) କୋଭିଡ୍ ମହାମାରୀର ସୁଯୋଗ ନେଇ ବିକ୍ରିୟ ବୃଦ୍ଧି କରିବା ପାଇଁ କାର୍ଯ୍ୟ ଆରମ୍ଭ କରିଛି । ସେ ଥିଆର ଉଦ୍ଦେଶ୍ୟକୁ ସାଧିବା କରିବା ପାଇଁ କେତେ ଗୁଡ଼ିକ ବିପଣନ ଶୈଳୀକୁ ଯୁଗ୍ମ କରି ବ୍ୟବହାର କଲେ । ସେ ଏହି ଶୈଳୀମାନଙ୍କୁ ଗଠନ କରିବା ପାଇଁ (designing these tools), 4ଟି ସମ୍ଭବ ଉପକ୍ରମ କଲେ ।

ଦକ 1 - ଏମାନଙ୍କ ଦ୍ଵାରା ବ୍ୟବହୃତ ହୋଇଥିବା ଶୈଳୀଗୁଡ଼ି ଅବ୍ୟକ୍ତିଗତ ସଞ୍ଚାର ଥିଲା ଯାହାଗୁଡ଼ି ମୂଲ୍ୟ ଦିଆଯାଇଥିଲା ।

ଦକ 2 - ଏମାନଙ୍କ ଦ୍ଵାରା ବ୍ୟବହୃତ ହୋଇଥିବା ଶୈଳୀଗୁଡ଼ି, ବିକ୍ରୟ କରିବା ଉଦ୍ଦେଶ୍ୟ ପାଇଁ ଗୋଟିଏ ବିପ୍ଳା ଚତୋଧୂର ଉଦ୍ଦେଶ୍ୟରେ ଆଣି କରାଯାଇଥିବା ଉପଗୋଳା ମାନଙ୍କ ସହିତ ମୌଖିକ ସମ୍ବାଦରେ ବାର୍ତ୍ତା ଆଦାନ ପ୍ରଦାନ କରାଯାଇଥିଲା ।

ଦକ 3 - ଏହି ଦକ ସ୍ଵତ୍ଵାବଧୀ ପ୍ରୋଫାଇଲ ରାଖିବାକୁ ବ୍ୟବହାର କଲେ ଯାହାର ଉଦ୍ଦେଶ୍ୟ ଥିଲା କ୍ରେତାମାନଙ୍କୁ ତୁରନ୍ତ ବିଶିଷ୍ଟ ପାଇଁ ଗଠାଣିତ କରିବା ।

ଦକ 4 - ଏମାନଙ୍କ ଦ୍ଵାରା ବ୍ୟବହୃତ ହୋଇଥିବା ଶୈଳୀଗୁଡ଼ି ଅବ୍ୟକ୍ତିଗତ ସଞ୍ଚାର ମାଧ୍ୟମ ଯାହାର ମୂଲ୍ୟ ଦିଆଯାଇନଥିଲା ।

ଦକ-1 ଦ୍ଵାରା ବ୍ୟବହୃତ ହୋଇଥିବା ଶୈଳୀଗୁଡ଼ି _____ ଅଟେ

1. ବିଜ୍ଞାପନ
2. ଜନ ସମ୍ପର୍କ
3. ପ୍ରଚାର କରିବା
4. ବ୍ୟକ୍ତିଗତ ବିକ୍ରି ପ୍ରଣାଳୀ

Options :

- 485584145933. 1
- 485584145934. 2
- 485584145935. 3
- 485584145936. 4

Question Number : 100 Question Id : 48558436485 Question Type : MCQ Option Shuffling : No Is Question Mandatory : No Calculator : None Response Time : N.A Think Time : N.A Minimum Instruction Time : 0

Correct Marks : 5 Wrong Marks : 1

Question Key Details :

Key	Value
Comprehension	Comp2

Safex Ltd is a company manufacturing masks. The newly appointed marketing manager of the firm has taken 'Covid Pandemic' as an opportunity to increase sales. He used a combination of tools to achieve its communication objective. He constituted 4 teams for designing these tools.

Team 1 :- The tool used by them was an impersonal form of communication which was paid for.

Team 2:- The tool used by them involves oral presentation of message in the form of conversation with one or more prospective customers for the purpose of making sales

Team 3:- This team used short-term incentives which were designed to encourage the buyers to make immediate purchase.

Team 4:- This team used a non-personal form of communication which was non-paid.

All the teams successfully designed their tools and achieved their desired results.

The tool used by Team 2 is _____

1. Public relations
2. Personal selling
3. Advertising
4. Publicity

Options :

- 485584145937. 1
- 485584145938. 2
- 485584145939. 3
- 485584145940. 4

Question Number : 100 Question Id : 48558436485 Question Type : MCQ Option Shuffling : No Is Question Mandatory : No Calculator : None Response Time : N.A Think Time : N.A Minimum Instruction Time : 0

Correct Marks : 5 Wrong Marks : 1

Question Key Details :

Key	Value
Comprehension	Comp2

ନିମ୍ନ ଅନୁଚ୍ଛେଦଗୁଡ଼ିକୁ ପଠନ କରି ପ୍ରଶ୍ନ ସଂଖ୍ୟା 46ରୁ 50ର ଉତ୍ତର ଦିଅନ୍ତୁ ।

କେମ୍ପେସ୍ ଲିମିଟେଡ୍ ଗୋଟିଏ କମ୍ପାନୀ ଯାହା ମୁଖା (Mask) ତିଆରି କରେ । ନୂତନ ନିୟୁତ୍ତି ପାଠାୟକ ବିପଣନ ପରିଚାଳକ (marketing manager) କୋଭିଡ୍ ମହାମାରୀର ସୁଯୋଗ ନେଇ ବିକ୍ରିୟ ବୃଦ୍ଧି କରିବା ପାଇଁ କାର୍ଯ୍ୟ ଆରମ୍ଭ କରିଛି । ସେ ଯତ୍ନ ଉଦ୍ଦେଶ୍ୟକୁ ସାଧିବା ପାଇଁ କେତେ ଗୁଡ଼ିକ ବିପଣନ ଶୃଙ୍ଖଳକୁ ସୂଚନା କରି ବ୍ୟବହାର କଲେ । ସେ ଏହି ଶୃଙ୍ଖଳ ମାନକୁ ଗଠନ କରିବା ପାଇଁ (designing these tools), 4ଟି ସମ୍ଭବ ଉପକ୍ରମ କଲେ ।

ଦକ 1 - ଏମାନଙ୍କ ଦ୍ଵାରା ବ୍ୟବହୃତ ହୋଇଥିବା ଶୃଙ୍ଖଳାଟି ଅବ୍ୟକ୍ତିଗତ ସଂସାର ଥିଲା ଯାହାକି ମୂଲ୍ୟ ଦିଆଯାଇଥିଲା ।

ଦକ 2 - ଏମାନଙ୍କ ଦ୍ଵାରା ବ୍ୟବହୃତ ହୋଇଥିବା ଶୃଙ୍ଖଳାଟି, ବିକ୍ରୟ କରିବା ଉଦ୍ଦେଶ୍ୟ ପାଇଁ ଗୋଟିଏ ଜିପ୍ସା ଚତୋର୍ଥକ ଉଦ୍ଦେଶ୍ୟରେ ଆଣି କରାଯାଇଥିବା ଉପଗୋଳା ମାନଙ୍କ ସହିତ ମୌଖିକ ସମ୍ବାଦରେ ବାର୍ତ୍ତା ଆଦାନ ପ୍ରଦାନ କରାଯାଇଥିଲା ।

ଦକ 3 - ଏହି ଦକ ସ୍ଵତ୍ଵାଧିକାରୀ ପ୍ରୋଫାଇଲ ରାଖିବାକୁ ବ୍ୟବହାର କଲେ ଯାହାର ଉଦ୍ଦେଶ୍ୟ ଥିଲା କ୍ରେତାମାନଙ୍କୁ ତୁରନ୍ତ ବିଶିଷ୍ଟ ପାଇଁ ଗଠାଣିତ କରିବା ।

ଦକ 4 - ଏମାନଙ୍କ ଦ୍ଵାରା ବ୍ୟବହୃତ ହୋଇଥିବା ଶୃଙ୍ଖଳାଟି ଅବ୍ୟକ୍ତିଗତ ସଂସାର ମାଧ୍ୟମ ଯାହାର ମୂଲ୍ୟ ଦିଆଯାଇନଥିଲା ।

ଦକ-2 ଦ୍ଵାରା ବ୍ୟବହୃତ ହୋଇଥିବା ଶୃଙ୍ଖଳାଟି _____ ଅଟେ

1. ଉପସମ୍ପର୍କ
2. ବ୍ୟକ୍ତିଗତ ବିକ୍ରୟ ପ୍ରଣାଳୀ
3. ବିକ୍ରୟ
4. ପ୍ରଚାର କରିବା

Options :

- 485584145937. 1
- 485584145938. 2
- 485584145939. 3
- 485584145940. 4

History

Group Number :	4
Group Id :	485584824
Group Maximum Duration :	45
Group Minimum Duration :	45
Show Attended Group? :	No
Edit Attended Group? :	No
Break time :	0
Group Marks :	200
Is this Group for Examiner? :	No
Examiner permission :	Cant View
Show Progress Bar? :	No

History

Section Id :	485584948
Section Number :	1
Section type :	Online
Mandatory or Optional :	Mandatory
Number of Questions :	50
Number of Questions to be attempted :	40
Section Marks :	200
Enable Mark as Answered Mark for Review and Clear Response :	Yes
Maximum Instruction Time :	0
Sub-Section Number :	1
Sub-Section Id :	4855842696
Question Shuffling Allowed :	Yes
Is Section Default? :	null

Question Number : 101 Question Id : 48558436486 Question Type : MCQ Option Shuffling : No Is Question Mandatory :
No Calculator : None Response Time : N.A Think Time : N.A Minimum Instruction Time : 0
Correct Marks : 5 Wrong Marks : 1

Question Key Details :

Key	Value
Comprehension	MCQ

Who made the following statement: "Marshall left India three thousand years older than he had found her."

1. Daya Ram Sahni
2. Rakhai Das Banerji
3. R.E. M. Wheeler
4. S.N. Roy

Options :

- 485584145941. 1
- 485584145942. 2
- 485584145943. 3
- 485584145944. 4

Question Number : 101 Question Id : 48558436486 Question Type : MCQ Option Shuffling : No Is Question Mandatory :
No Calculator : None Response Time : N.A Think Time : N.A Minimum Instruction Time : 0
Correct Marks : 5 Wrong Marks : 1

Question Key Details :

Key	Value
Comprehension	MCQ

ନିମ୍ନଲିଖିତ ଗଢ଼ିଟି କିଏ କହିଥିଲେ "ମାଗାଲ ଭାବତକୁ ଯେଉଁ ଅବସ୍ଥାରେ ପାଠ୍ୟରେ, ସେ ଜାହାକୁ ତିନି ହଜାର ବର୍ଷ ପଛୁଆ କରି ଛାଡ଼ିଥିଲେ"

1. ଦୟା ରାମ ସାହାଣୀ
2. ରାଜାଜ ଦାସ ବରାଜୀ
3. ଆର୍.ଇ.ଏସ୍. ବୁଦ୍ଧଲର
4. ଏସ୍.ଏନ୍. ରୟ

Options :

485584145941. 1
485584145942. 2
485584145943. 3
485584145944. 4

Question Number : 102 Question Id : 48558436487 Question Type : MCQ Option Shuffling : No Is Question Mandatory : No Calculator : None Response Time : N.A Think Time : N.A Minimum Instruction Time : 0

Correct Marks : 5 Wrong Marks : 1

Question Key Details :

Key	Value
Comprehension	MCQ

Archaeological study of a mound can provide cultural sequence for a site. Study of such layers is called

- _____
1. Ethnography
 2. Stratigraphy
 3. Epigraphy
 4. Sociography

Options :

485584145945. 1
485584145946. 2
485584145947. 3
485584145948. 4

Question Number : 102 Question Id : 48558436487 Question Type : MCQ Option Shuffling : No Is Question Mandatory : No Calculator : None Response Time : N.A Think Time : N.A Minimum Instruction Time : 0

Correct Marks : 5 Wrong Marks : 1

Question Key Details :

Key	Value
Comprehension	MCQ

ଉତ୍ତର ପରଗଜ୍ଞିକ ପରାସରୁ କୈଶପି ଘାଟର ସାଂସ୍କୃତିକ ଜ୍ରମ ବିଷୟରେ ବହୁତ କିଛି ଜାଣି ହୁଏ। ଏହି ଉତ୍ତର ମାନକର ପରାସରକୁ କଣ କୁହାଯାଏ:

1. ଏଥଲେଗ୍ରାଫି
2. ଷ୍ଟାଟିଗ୍ରାଫି
3. ଏପିଗ୍ରାଫି
4. ଚୋସିଓଗ୍ରାଫି

Options :

485584145945. 1
485584145946. 2
485584145947. 3
485584145948. 4

Question Number : 103 Question Id : 48558436488 Question Type : MCQ Option Shuffling : No Is Question Mandatory : No Calculator : None Response Time : N.A Think Time : N.A Minimum Instruction Time : 0

Correct Marks : 5 Wrong Marks : 1

Question Key Details :

Key	Value
Comprehension	MCQ

Which of the following Harappan sites were located near the coast?

1. Banawali and Rakhigarhi
2. Nageshwar and Balakot
3. Ganweriwala and Mitathal
4. Kot-Diji and Kalibangan

Options :

485584145949. 1
485584145950. 2
485584145951. 3
485584145952. 4

Question Number : 103 Question Id : 48558436488 Question Type : MCQ Option Shuffling : No Is Question Mandatory : No Calculator : None Response Time : N.A Think Time : N.A Minimum Instruction Time : 0

Correct Marks : 5 Wrong Marks : 1

Question Key Details :

Key	Value
Comprehension	MCQ

ନିମ୍ନଲିଖିତ କେଉଁ ହରଷା ଶାଳ ସ୍ମୃତିକ ଉପଦୁନରେ ଅବସିତ ଥିବେ?

1. ବନଖଲି ଏବଂ ରାଣୀଗଡ଼ି
2. ନାଗେଶ୍ଵର ଏବଂ ବାଲୀକୋଟ
3. ଗନଝରିଡ଼ାଲା ଏବଂ ନିରୀଥାଲ
4. ଜୋରବିଜି ଏବଂ ଜାଲିଗଞ୍ଜଲ୍

Options :

485584145949. 1
485584145950. 2
485584145951. 3
485584145952. 4

Question Number : 104 Question Id : 48558436489 Question Type : MCQ Option Shuffling : No Is Question Mandatory : No Calculator : None Response Time : N.A Think Time : N.A Minimum Instruction Time : 0

Correct Marks : 5 Wrong Marks : 1

Question Key Details :

Key	Value
Comprehension	MCQ

Who among the following is often held as the 'Father of Indian Archaeology'?

1. John Marshall
2. Alexander Cunningham
3. James Prinsep
4. R.E.M. Wheeler

Options :

485584145953. 1
485584145954. 2
485584145955. 3
485584145956. 4

Question Number : 104 Question Id : 48558436489 Question Type : MCQ Option Shuffling : No Is Question Mandatory : No Calculator : None Response Time : N.A Think Time : N.A Minimum Instruction Time : 0

Correct Marks : 5 Wrong Marks : 1

Question Key Details :

Key	Value
Comprehension	MCQ

ନିମ୍ନଲିଖିତ ମଧ୍ୟରୁ କେଉଁ ସମ୍ପତ୍ତିକୁ ଭାରତୀୟ ପ୍ରତ୍ନତତ୍ତ୍ୱ ବିଜ୍ଞାନୀ କୁହାଯାଏ?

1. ଇନ୍ ମାର୍ଶାଲ
2. ଆଲେକ୍ସାଣ୍ଡର ବନିଂଗ୍ରାମ୍
3. ଚେମ୍ପୁ ପ୍ରିନସେପ
4. ଆର୍.ଇ.ଏମ୍. ହୁଜୁର

Options :

485584145953. 1
485584145954. 2
485584145955. 3
485584145956. 4

Question Number : 105 Question Id : 48558436490 Question Type : MCQ Option Shuffling : No Is Question Mandatory : No Calculator : None Response Time : N.A Think Time : N.A Minimum Instruction Time : 0

Correct Marks : 5 Wrong Marks : 1

Question Key Details :

Key	Value
Comprehension	MCQ

Traces of canals have been found at the Harappan site of Shortughai, which is located in _____.

1. Punjab
2. Sind
3. Afghanistan
4. Gujarat

Options :

485584145957. 1
485584145958. 2
485584145959. 3
485584145960. 4

Question Number : 105 Question Id : 48558436490 Question Type : MCQ Option Shuffling : No Is Question Mandatory : No Calculator : None Response Time : N.A Think Time : N.A Minimum Instruction Time : 0

Correct Marks : 5 Wrong Marks : 1

Question Key Details :

Key	Value
Comprehension	MCQ

ହରାହାର ସର୍ବପ୍ରଥମ ଶ୍ରୀମତେ ନାମର ଅବଶିଷ୍ଟାଣି ଦେଖିବାକୁ ମିଳିଥିଲା, ଯାହାକି ଅବଶିଷ୍ଟ ଅଛି:

1. ପଞ୍ଜାବ
2. ଭିନ୍ନ
3. ଆଫଗାନିସ୍ତାନ
4. ଗୁଜୁରାଟ

Options :

485584145957. 1
485584145958. 2
485584145959. 3
485584145960. 4

Question Number : 106 Question Id : 48558436491 Question Type : MCQ Option Shuffling : No Is Question Mandatory : No Calculator : None Response Time : N.A Think Time : N.A Minimum Instruction Time : 0

Correct Marks : 5 Wrong Marks : 1

Question Key Details :

Key	Value
Comprehension	MCQ

In ancient India, the first coins to bear the names and images of the rulers were issued by the _____.

1. Indo-Greeks
2. Kushans
3. Parthians
4. Shakas

Options :

485584145961. 1
485584145962. 2
485584145963. 3
485584145964. 4

Question Number : 106 Question Id : 48558436491 Question Type : MCQ Option Shuffling : No Is Question Mandatory : No Calculator : None Response Time : N.A Think Time : N.A Minimum Instruction Time : 0

Correct Marks : 5 Wrong Marks : 1

Question Key Details :

Key	Value
Comprehension	MCQ

ପ୍ରାଚୀନ ଭାରତରେ, ପ୍ରଥମ ମୁଦ୍ରା ଦେଉଥିବା ରାଷ୍ଟ୍ର ମାନଙ୍କର ନାମ ଏବଂ ସବି ଥିଲା ତାହା _____ କ ଦ୍ଵାରା ପ୍ରେରିତ ହୋଇଥିଲା।

1. ଇଣ୍ଡୋ-ଗ୍ରୀକ
2. କୁଶାଣ
3. ପର୍ସିଆନ
4. ଗାଳ

Options :

485584145961. 1
485584145962. 2
485584145963. 3
485584145964. 4

Question Number : 107 Question Id : 48558436492 Question Type : MCQ Option Shuffling : No Is Question Mandatory : No Calculator : None Response Time : N.A Think Time : N.A Minimum Instruction Time : 0

Correct Marks : 5 Wrong Marks : 1

Question Key Details :

Key	Value
Comprehension	MCQ

Which place are you visiting if you come across the lion capital built by Asoka?

1. Varanasi
2. Delhi
3. Sarnath
4. Ujjayini

Options :

485584145965. 1
485584145966. 2
485584145967. 3
485584145968. 4

Question Number : 107 Question Id : 48558436492 Question Type : MCQ Option Shuffling : No Is Question Mandatory : No Calculator : None Response Time : N.A Think Time : N.A Minimum Instruction Time : 0

Correct Marks : 5 Wrong Marks : 1

Question Key Details :

Key	Value
Comprehension	MCQ

ଆପଣାଯଦି ଅଶୋକଙ୍କ ଦ୍ୱାରା ନିର୍ମିତ ସିଂହ ରାଜଧାନୀ ଆସତ୍ତି, ତେବେ ଆପଣ କେଉଁ ସ୍ଥାନ ଗ୍ରହଣ କରୁଛନ୍ତି?

1. ଦାରଣାସୀ
2. ବିଲ୍ୱା
3. ସାରନାଥ
4. ଉତ୍କଳିନୀ

Options :

485584145965. 1
485584145966. 2
485584145967. 3
485584145968. 4

Question Number : 108 Question Id : 48558436493 Question Type : MCQ Option Shuffling : No Is Question Mandatory : No Calculator : None Response Time : N.A Think Time : N.A Minimum Instruction Time : 0

Correct Marks : 5 Wrong Marks : 1

Question Key Details :

Key	Value
Comprehension	MCQ

Prabhavati Gupta was the daughter of _____.

1. Chandragupta II
2. Samudragupta
3. Chandragupta Maurya
4. Skandgupta

Options :

485584145969. 1
485584145970. 2
485584145971. 3
485584145972. 4

Question Number : 108 Question Id : 48558436493 Question Type : MCQ Option Shuffling : No Is Question Mandatory : No Calculator : None Response Time : N.A Think Time : N.A Minimum Instruction Time : 0

Correct Marks : 5 Wrong Marks : 1

Question Key Details :

Key	Value
Comprehension	MCQ

ପ୍ରଭାବତା ଗୁପ୍ତା କାହାର କନ୍ୟା ଥିଲେ?

1. ଚନ୍ଦ୍ରଗୁପ୍ତ II
2. ଉତ୍ତରଗୁପ୍ତ
3. ଚନ୍ଦ୍ରଗୁପ୍ତ ମୌର୍ଯ୍ୟ
4. ଅଶୋକ

Options :

485584145969. 1
485584145970. 2
485584145971. 3
485584145972. 4

Question Number : 109 Question Id : 48558436494 Question Type : MCQ Option Shuffling : No Is Question Mandatory : No Calculator : None Response Time : N.A Think Time : N.A Minimum Instruction Time : 0

Correct Marks : 5 Wrong Marks : 1

Question Key Details :

Key	Value
Comprehension	MCQ

Which of the following statements are **correct**?

- A. The Dharmasutras and Dharmashastras recognised as many as twelve forms of marriages.
- B. People were classified into gotras and each gotra was named after a Vedic seer.
- C. Jatis, which shared a common occupation, were sometimes organised into shrenis or guilds.
- D. Women were allowed to retain the gifts they received on their marriage as 'Stridhana' to be inherited by their children.
- E. Matriliney is the term used when descent is traced through the mother.

Choose the **correct** answer from the options given below:

1. A, B, C, E only
2. A, C, D, E only
3. B, C, D, E only
4. A, B, D, E only

Options :

485584145973. 1
485584145974. 2
485584145975. 3
485584145976. 4

Question Number : 109 Question Id : 48558436494 Question Type : MCQ Option Shuffling : No Is Question Mandatory : No Calculator : None Response Time : N.A Think Time : N.A Minimum Instruction Time : 0

Correct Marks : 5 Wrong Marks : 1

Question Key Details :

Key	Value
Comprehension	MCQ

ନିମ୍ନଲିଖିତ ଭାବି ମଧ୍ୟରୁ କେଉଁ ବୃତ୍ତିକ ସତ୍ୟ ଅଟେ:

- A. ଧର୍ମସୂତ୍ର ଏବଂ ଧର୍ମଶାସ୍ତ୍ର ଦ୍ଵାରା ପ୍ରଜ୍ଞାତର ବିବାହକୁ ମାନ୍ୟତା ଦେଇଥିଲେ।
- B. ଲୋକମାନଙ୍କୁ ଗୋପ୍ତରେ ଶ୍ରେଣୀଭୁକ୍ତ କରାଯାଇଥିଲା ଏବଂ ପ୍ରତି ଗୋପ୍ତକୁ ଏକ ବୈଦିକମୁନୀଙ୍କ ନାମରେ ନାମକରଣ କରାଯାଇଥିଲା।
- C. ଯେଉଁ କନ୍ୟାଧାରଣ ମାନଙ୍କର ସମାନ ପ୍ରକାର ଦୁଇ ଥିଲା ସେମାନଙ୍କୁ ଏକା କାଟି ଅନ୍ତର୍ଭୁକ୍ତ କରାଯାଇଥିଲା।
- D. ସ୍ଵାଲୋକ ମାନଙ୍କୁ ବିବାହରେ ମିଳିଥିବା ଉପହାର ଗୁଡ଼ିକୁ ସ୍ଵାଧୀନ ଭାବରେ ଉତ୍ତରାଧିକାର ଅଧିକାର ଥିଲା ଏବଂ ସେହି ଧନ ତାଙ୍କ ପିଲାମାନେ ଉତ୍ତରାଧିକାରୀ ଭାବେ ପ୍ରାପ୍ତ କରୁଥିଲେ।
- E. ମାଁଙ୍କ ଦରମରୁ ଯେବେ ବଂଶଧର ବନ୍ଧାଯାଏ ବା ଭର ସଂପାଦନା ଯାହାକୁ ମାତୃଲିନି କୁହାଯାଏ।

ନିମ୍ନଲିଖିତ ବିକଳ ମଧ୍ୟରୁ ସଠିକ୍ ଉତ୍ତରଟି ଚାହୁଁ:

- 1. କେବଳ A, B, C, E
- 2. କେବଳ A, C, D, E
- 3. କେବଳ B, C, D, E
- 4. କେବଳ A, B, D, E

Options :

- 485584145973. 1
- 485584145974. 2
- 485584145975. 3
- 485584145976. 4

Question Number : 110 Question Id : 48558436495 Question Type : MCQ Option Shuffling : No Is Question Mandatory : No Calculator : None Response Time : N.A Think Time : N.A Minimum Instruction Time : 0

Correct Marks : 5 Wrong Marks : 1

Question Key Details :

Key	Value
Comprehension	MCQ

What did Ibn Battuta observe when he visited the city of Delhi?

- A. Its beautiful temple architecture in every part of the city.
- B. Its fine cemetery with domes and arches.
- C. Its imposing stupa in the heart of the city.
- D. Its twenty-eight big darwazas.
- E. Its many waterfalls within the city.

Choose the correct answer from the options given below:

- 1. A, B only
- 2. C, D only
- 3. B, D only
- 4. D, E only

Options :

- 485584145977. 1
- 485584145978. 2
- 485584145979. 3
- 485584145980. 4

Question Number : 110 Question Id : 48558436495 Question Type : MCQ Option Shuffling : No Is Question Mandatory : No Calculator : None Response Time : N.A Think Time : N.A Minimum Instruction Time : 0

Correct Marks : 5 Wrong Marks : 1

Question Key Details :

Key	Value
Comprehension	MCQ

ଇବନ ବଟୁତା ଯେତେ ଦିଲ୍ଲୀ ଭ୍ରମଣ କରିଥିଲେ, ସେ କଣ ଅନୁଭବ କରିଥିଲେ?

- A. ସହରର ସବୁଠାରେ ସୁନ୍ଦର ମନ୍ଦିର
- B. ଏହାର ଅତିସୁନ୍ଦର ଗମ୍ଭୀରୀର ଏବଂ ଅର୍ଦ୍ଧଗୋଲାକାର ସମାଧିକ୍ଷେତ୍ର
- C. ସହରର ହୃଦୟରେ ଖୁବ୍ ଗଠନ
- D. ଏହାର ଅଠେଇଶଟି ବୃହତ କିରୀଟ
- E. ସହର ମଧ୍ୟରେ ଏହାର ବହୁ କନ ପ୍ରସାଦ

ନିମ୍ନଲିଖିତ ଠିକ୍ କିମ୍ବା ଭ୍ରମଣ କରିଥିଲେ, ସେ କଣ ଅନୁଭବ କରିଥିଲେ?

- 1. କେବଳ A ଏବଂ B
- 2. କେବଳ C ଏବଂ D
- 3. କେବଳ B ଏବଂ D
- 4. କେବଳ D ଏବଂ E

Options :

- 485584145977. 1

485584145978. 2
485584145979. 3
485584145980. 4

Question Number : 111 Question Id : 48558436496 Question Type : MCQ Option Shuffling : No Is Question Mandatory : No Calculator : None Response Time : N.A Think Time : N.A Minimum Instruction Time : 0

Correct Marks : 5 Wrong Marks : 1

Question Key Details :

Key	Value
Comprehension	MCQ

Match List I with List II:

LIST I (Traders)		LIST II (Countries)	
A.	Nicolo de Conti	I.	England
B.	Duarte Barbosa	II.	Italy
C.	Peter Mundy	III.	Russia
D.	Afanasii Nikitin	IV.	Portugal

Choose the **correct** answer from the options given below:

1. A-II, B-I, C-III, D-IV
2. A-II, B-III, C-IV, D-I
3. A-IV, B-III, C-II, D-I
4. A-II, B-IV, C-I, D-III

Options :

485584145981. 1
485584145982. 2
485584145983. 3
485584145984. 4

Question Number : 111 Question Id : 48558436496 Question Type : MCQ Option Shuffling : No Is Question Mandatory : No Calculator : None Response Time : N.A Think Time : N.A Minimum Instruction Time : 0

Correct Marks : 5 Wrong Marks : 1

Question Key Details :

Key	Value
Comprehension	MCQ

ଲିଷ୍ଟ I ସହ ଲିଷ୍ଟ II ମିଶାନ୍ତୁ:-

ଲିଷ୍ଟ I ବ୍ୟବସାୟୀ		ଲିଷ୍ଟ II ଦେଶ	
A.	ନିକୋଲୋ ଦେ କର୍ଡି	I.	ଓମାନ
B.	ସୁଲତାନୀ ବାଉଦୋଆ	II.	ଭାରତ
C.	ପିପେ ପୁଟେ	III.	ରୁଷିଆ
D.	ଅପତାସି ନିକିରୁ	IV.	ପର୍ତ୍ତୁଗାଲ

ନିମ୍ନଲିଖିତ ବିକଳ୍ପ ମଧ୍ୟରୁ ସଠିକ୍ ଉତ୍ତରଟି ବାଛନ୍ତୁ :

1. A-II, B-I, C-III, D-IV
2. A-II, B-III, C-IV, D-I
3. A-IV, B-III, C-II, D-I
4. A-II, B-IV, C-I, D-III

Options :

485584145981. 1
485584145982. 2
485584145983. 3
485584145984. 4

Question Number : 112 Question Id : 48558436497 Question Type : MCQ Option Shuffling : No Is Question Mandatory : No Calculator : None Response Time : N.A Think Time : N.A Minimum Instruction Time : 0

Correct Marks : 5 Wrong Marks : 1

Question Key Details :

Key	Value
Comprehension	MCQ

Match List I with List II:

LIST I		LIST II	
A.	Alvars	I.	Bijak
B.	Virashaiva	II.	Tevaram
C.	Nayanars	III.	Nalayira Divyaprabandham
D.	Kabir	IV.	Vachanas

Choose the correct answer from the options given below:

1. A-I, B-IV, C-III, D-II
2. A-III, B-IV, C-II, D-I
3. A-II, B-I, C-III, D-IV
4. A-IV, B-III, C-I, D-II

Options :

485584145985. 1

485584145986. 2
485584145987. 3
485584145988. 4

Question Number : 112 Question Id : 48558436497 Question Type : MCQ Option Shuffling : No Is Question Mandatory : No Calculator : None Response Time : N.A Think Time : N.A Minimum Instruction Time : 0

Correct Marks : 5 Wrong Marks : 1

Question Key Details :

Key	Value
Comprehension	MCQ

ଲିଷ୍ଟ I ଥର ଲିଷ୍ଟ II ମିଶାନ୍ତୁ:-

ଲିଷ୍ଟ I		ଲିଷ୍ଟ II	
A.	ଫୁଲବର	I.	ବିଭାଜ
B.	କାଗଜକିଟ	II.	କରକାରୀମ
C.	କାନ୍ଥକାଗ	III.	କାନ୍ଥକାଗର ବିକାଶପ୍ରଧାନତା
D.	କରକାରୀ	IV.	କରକାରୀ

ନିମ୍ନଲିଖିତ ବିକଳ୍ପ ମଧ୍ୟରୁ ଠିକ୍ କରକାରୀ ବାନ୍ଧନ୍ତୁ:

1. A-I, B-IV, C-III, D-II
2. A-III, B-IV, C-II, D-I
3. A-II, B-I, C-III, D-IV
4. A-IV, B-III, C-I, D-II

Options :

485584145985. 1
485584145986. 2
485584145987. 3
485584145988. 4

Question Number : 113 Question Id : 48558436498 Question Type : MCQ Option Shuffling : No Is Question Mandatory : No Calculator : None Response Time : N.A Think Time : N.A Minimum Instruction Time : 0

Correct Marks : 5 Wrong Marks : 1

Question Key Details :

Key	Value
Comprehension	MCQ

Match List I with List II:

LIST I (Sufi Teachers)		LIST II (Year of Death)	
A.	Mumuddin Sijzi	I.	1265
B.	Fariduddin Ganj-i-Shakar	II.	1235
C.	Nizamuddin Auliya	III.	1356
D.	Nasiruddin Chirag	IV.	1325

Choose the correct answer from the options given below:

1. A-II, B-III, C-I, D-IV
2. A-I, B-II, C-III, D-IV
3. A-II, B-I, C-IV, D-III
4. A-IV, B-III, C-I, D-II

Options :

485584145989. 1
485584145990. 2
485584145991. 3
485584145992. 4

Question Number : 113 Question Id : 48558436498 Question Type : MCQ Option Shuffling : No Is Question Mandatory : No Calculator : None Response Time : N.A Think Time : N.A Minimum Instruction Time : 0

Correct Marks : 5 Wrong Marks : 1

Question Key Details :

Key	Value
Comprehension	MCQ

ଲିଷ୍ଟ I ସହ ଲିଷ୍ଟ II ମିଶାନ୍ତୁ:-

ଲିଷ୍ଟ I (ସୁଫି ଶିକ୍ଷକଗଣ)		ଲିଷ୍ଟ II (ମୃତ୍ୟୁର ବର୍ଷ)	
A.	ମୁମୁଦ୍ଦିନ ସିଜି	I.	1265
B.	ଫାରିଦୁଦ୍ଦିନ ଗଞ୍ଜ-ଇ-ଶକାର	II.	1235
C.	ନିଜାମୁଦ୍ଦିନ ଅୂଲିଆ	III.	1356
D.	ନାସିରୁଦ୍ଦିନ ଚିରାଗ	IV.	1325

ନିମ୍ନଲିଖିତ ବିକଳ ମଧ୍ୟରୁ ଠିକ୍ ଉତ୍ତରଟି ଚାନ୍ତୁ

1. A-II, B-III, C-I, D-IV
2. A-I, B-II, C-III, D-IV
3. A-II, B-I, C-IV, D-III
4. A-IV, B-III, C-I, D-II

Options :

485584145989. 1
485584145990. 2
485584145991. 3
485584145992. 4

Question Number : 114 Question Id : 48558436499 Question Type : MCQ Option Shuffling : No Is Question Mandatory : No Calculator : None Response Time : N.A Think Time : N.A Minimum Instruction Time : 0

Correct Marks : 5 Wrong Marks : 1

Question Key Details :

Key	Value
Comprehension	MCQ

Choose the **incorrect** statement out of the following:

1. Guru Nanak rejected the sacrifices and rituals of both Hindus and Muslims.
2. Guru Nanak did not wish to establish his own new religion.
3. Guru Nanak advocated the form of Nirguna Bhakti.
4. Guru Nanak appointed one his disciple 'Angad' to succeed him as the perceptor.

Options :

485584145993. 1
485584145994. 2
485584145995. 3
485584145996. 4

Question Number : 114 Question Id : 48558436499 Question Type : MCQ Option Shuffling : No Is Question Mandatory : No Calculator : None Response Time : N.A Think Time : N.A Minimum Instruction Time : 0

Correct Marks : 5 Wrong Marks : 1

Question Key Details :

Key	Value
Comprehension	MCQ

ନିମ୍ନଲିଖିତ ମଧ୍ୟରୁ ଠିକ୍ ଭାବରେ ବାକ୍ୟକୁ ଚାହାନ୍ତୁ:

1. ଗୁରୁ ନାନକ ଉଭୟ ହିନ୍ଦୁ ଏବଂ ମୁସଲମାନ ମାନଙ୍କର ବଦିବାଜ ଏବଂ ପ୍ରଥାକୁ ଅସ୍ୱୀକାର କରିଥିଲେ।
2. ଗୁରୁ ନାନକ ନିଜର ନୂଆ ଧର୍ମ ଗ୍ରହଣ କରିବାକୁ ଚାହୁଁଥିଲେ।
3. ଗୁରୁ ନାନକ ନିର୍ଗୁଣ ଭକ୍ତିପ୍ରଥାକୁ ଗ୍ରହଣ କରୁଥିଲେ।
4. ଗୁରୁ ନାନକ ତାଙ୍କର ଜଣେ ଶିଷ୍ୟ 'ଅଙ୍ଗଦ' କୁ ନିଜର ଭାବି ଦିଗପର୍ଶକ ଭାବେ ନିଯୁକ୍ତି ଦେଇଥିଲେ।

Options :

485584145993. 1
485584145994. 2
485584145995. 3
485584145996. 4

Question Number : 115 Question Id : 48558436500 Question Type : MCQ Option Shuffling : No Is Question Mandatory : No Calculator : None Response Time : N.A Think Time : N.A Minimum Instruction Time : 0

Correct Marks : 5 Wrong Marks : 1

Question Key Details :

Key	Value
Comprehension	MCQ

Chronologically arrange the landmark events in the discovery of Vijayanagara.

- A. Conservation under John Marshall.
- B. Documentation of temple inscriptions by J.F. Fleet.
- C. Survey of Vijayanagara by Colin Mackenzie.
- D. Status of world heritage site by UNESCO.
- E. Photography of the archaeological site under Alexander Greenlaw.

Choose the **correct** answer from the options given below:

- 1. C, E, B, A, D
- 2. B, D, A, E, C
- 3. C, D, A, B, E
- 4. E, A, C, D, B

Options :

- 485584145997. 1
- 485584145998. 2
- 485584145999. 3
- 485584146000. 4

Question Number : 115 Question Id : 48558436500 Question Type : MCQ Option Shuffling : No Is Question Mandatory : No Calculator : None Response Time : N.A Think Time : N.A Minimum Instruction Time : 0

Correct Marks : 5 Wrong Marks : 1

Question Key Details :

Key	Value
Comprehension	MCQ

ବିଜୟ ନଗର ଆବିଷ୍କାରରେ ବିଭିନ୍ନ ପ୍ରକାରର ଗୁଡ଼ିକୁ ଅନୁସନ୍ଧାନ କରାଯାଇଛି:

- A. ଜନ୍ମ ମାର୍ଗାଲକ ଅନୁଧ୍ୟାନରେ ସଂରକ୍ଷଣ
- B. କେ.ଏଫ୍. ପୁରକ ଦ୍ଵାରା ମନ୍ଦିର ଶିଳ୍ପକଳାର ପଞ୍ଜୀକରଣ
- C. କୋଲିନ ମ୍ୟାକେନଜିକ ଦ୍ଵାରା ବିଜୟ ନଗର ପରୀକ୍ଷଣ
- D. ୟୁନେସ୍କୋ (UNESCO) ଦ୍ଵାରା ବିଶ୍ଵ ଐତିହାସିକ ଛାନ ଗୋଷ୍ଠୀ
- E. ଆଲେକ୍ସାଣ୍ଡର ଗ୍ରୀନଲକ ଅନୁଧ୍ୟାନରେ ପ୍ରତ୍ନତାତ୍ତ୍ଵିକ ଛାନର ଫୋଟୋଗ୍ରାଫି

ନିମ୍ନଲିଖିତ ବିକଳ୍ପ ମଧ୍ୟରୁ ସଠିକ୍ ଉତ୍ତରଟି ଚାହନ୍ତୁ:

- 1. C, E, B, A, D
- 2. B, D, A, E, C
- 3. C, D, A, B, E
- 4. E, A, C, D, B

Options :

- 485584145997. 1
- 485584145998. 2
- 485584145999. 3
- 485584146000. 4

Question Number : 116 Question Id : 48558436501 Question Type : MCQ Option Shuffling : No Is Question Mandatory : No Calculator : None Response Time : N.A Think Time : N.A Minimum Instruction Time : 0

Correct Marks : 5 Wrong Marks : 1

Question Key Details :

Key	Value
Comprehension	MCQ

Arrange the following dynasties in a chronological order.

- A. Tuluva dynasty
- B. Saluva dynasty
- C. Aravidu dynasty
- D. Sangama dynasty

Choose the **correct** answer from the options given below:

- 1. A, B, C, D
- 2. A, B, D, C
- 3. C, D, A, B
- 4. D, B, A, C

Options :

- 485584146001. 1
- 485584146002. 2
- 485584146003. 3

485584146004. 4

Question Number : 116 Question Id : 48558436501 Question Type : MCQ Option Shuffling : No Is Question Mandatory : No Calculator : None Response Time : N.A Think Time : N.A Minimum Instruction Time : 0

Correct Marks : 5 Wrong Marks : 1

Question Key Details :

Key	Value
Comprehension	MCQ

ନିମ୍ନଲିଖିତ ରାଜବଂଶ ଗୁଡ଼ିକୁ ସମୟାନୁକ୍ରମିକ ସଜାଡ଼ି ଲେଖନ୍ତୁ:

- A. ତୁଳୁଭା ରାଜବଂଶ
- B. ସାଲୁଭା ରାଜବଂଶ
- C. ପରବିନ୍ଦୁ ରାଜବଂଶ
- D. ସଂଜମ ରାଜବଂଶ

ନିମ୍ନଲିଖିତ ବିକଳ୍ପ ମଧ୍ୟରୁ ସଠିକ୍ ଉତ୍ତରଟି ଚାନ୍ତୁ:

- 1. A, B, C, D
- 2. A, B, D, C
- 3. C, D, A, B
- 4. D, B, A, C

Options :

- 485584146001. 1
- 485584146002. 2
- 485584146003. 3
- 485584146004. 4

Question Number : 117 Question Id : 48558436502 Question Type : MCQ Option Shuffling : No Is Question Mandatory : No Calculator : None Response Time : N.A Think Time : N.A Minimum Instruction Time : 0

Correct Marks : 5 Wrong Marks : 1

Question Key Details :

Key	Value
Comprehension	MCQ

What is a 'Gopuram' in the context of Vijayanagara Empire?

- 1. Mandapa
- 2. Platform
- 3. Shrine
- 4. Gateway

Options :

- 485584146005. 1
- 485584146006. 2
- 485584146007. 3

485584146008. 4

Question Number : 117 Question Id : 48558436502 Question Type : MCQ Option Shuffling : No Is Question Mandatory : No Calculator : None Response Time : N.A Think Time : N.A Minimum Instruction Time : 0

Correct Marks : 5 Wrong Marks : 1

Question Key Details :

Key	Value
Comprehension	MCQ

ବିଭିନ୍ନ ନଗର ସାମ୍ରାଜ୍ୟ ସମ୍ବନ୍ଧରେ 'ଚରାପୁରମ' ଶବ୍ଦର ଅର୍ଥ କଣ?

1. ମଞ୍ଜରୀ
2. ଭଟ୍ଟରାଜ
3. ପୁଟ୍ଟରାଜ
4. ପ୍ରବେଶପଥ

Options :

485584146005. 1
485584146006. 2
485584146007. 3
485584146008. 4

Question Number : 118 Question Id : 48558436503 Question Type : MCQ Option Shuffling : No Is Question Mandatory : No Calculator : None Response Time : N.A Think Time : N.A Minimum Instruction Time : 0

Correct Marks : 5 Wrong Marks : 1

Question Key Details :

Key	Value
Comprehension	MCQ

Vijayanagara kings claimed to rule on behalf of the God _____.

1. Pampadevi
2. Virupaksha
3. Vitthala
4. Rama

Options :

485584146009. 1
485584146010. 2
485584146011. 3
485584146012. 4

Question Number : 118 Question Id : 48558436503 Question Type : MCQ Option Shuffling : No Is Question Mandatory : No Calculator : None Response Time : N.A Think Time : N.A Minimum Instruction Time : 0

Correct Marks : 5 Wrong Marks : 1

Question Key Details :

Key	Value
Comprehension	MCQ

ବିଜୟ ନଗର ର ରାଜାମାନେ _____ ଭଗବାନଙ୍କ ପକ୍ଷରୁ ଶାସନ କରୁଥିଲେ ବୋଲି ଜାଣି କରୁଥିଲେ।

1. ପାମାବେରୀ
2. ବିରୂପାକ୍ଷ
3. ବିପାକ୍ଷ
4. ରାମ

Options :

485584146009. 1
485584146010. 2
485584146011. 3
485584146012. 4

Question Number : 119 Question Id : 48558436504 Question Type : MCQ Option Shuffling : No Is Question Mandatory : No Calculator : None Response Time : N.A Think Time : N.A Minimum Instruction Time : 0

Correct Marks : 5 Wrong Marks : 1

Question Key Details :

Key	Value
Comprehension	MCQ

The Vijayanagara Empire was known to its contemporaries as _____.

1. Maharashtra Samrajyamu
2. Andhra Samrajyamu
3. Tamil Samrajyamu
4. Karnataka Samrajyamu

Options :

485584146013. 1
485584146014. 2
485584146015. 3
485584146016. 4

Question Number : 119 Question Id : 48558436504 Question Type : MCQ Option Shuffling : No Is Question Mandatory : No Calculator : None Response Time : N.A Think Time : N.A Minimum Instruction Time : 0

Correct Marks : 5 Wrong Marks : 1

Question Key Details :

Key	Value
Comprehension	MCQ

ବିଭିନ୍ନ ନଗର ସାମ୍ରାଜ୍ୟ ନିଜର ସମକାଳୀନ ସାମ୍ରାଜ୍ୟ ମାନଙ୍କ ମଧ୍ୟରେ କେଉଁ ନାମରେ ପରିଚିତ ଥିଲେ:

1. ମହଗାସ୍ତ୍ର ସାମ୍ରାଜ୍ୟରାମୁ
2. ଆଣ୍ଡ୍ର ସାମ୍ରାଜ୍ୟରାମୁ
3. ଚାଳିକ ସାମ୍ରାଜ୍ୟରାମୁ
4. କର୍ଣ୍ଣାଟକ ସାମ୍ରାଜ୍ୟରାମୁ

Options :

485584146013. 1
485584146014. 2
485584146015. 3
485584146016. 4

Question Number : 120 Question Id : 48558436505 Question Type : MCQ Option Shuffling : No Is Question Mandatory : No Calculator : None Response Time : N.A Think Time : N.A Minimum Instruction Time : 0

Correct Marks : 5 Wrong Marks : 1

Question Key Details :

Key	Value
Comprehension	MCQ

In the 17th century, Indo-Persian sources, the term for non-resident cultivators, who belonged to some other village but cultivated land elsewhere on contractual basis, were known as _____.

1. Khud-Kashta
2. Pahi-Kashta
3. Muqaddam
4. Muzarian

Options :

485584146017. 1
485584146018. 2
485584146019. 3
485584146020. 4

Question Number : 120 Question Id : 48558436505 Question Type : MCQ Option Shuffling : No Is Question Mandatory : No Calculator : None Response Time : N.A Think Time : N.A Minimum Instruction Time : 0

Correct Marks : 5 Wrong Marks : 1

Question Key Details :

Key	Value
Comprehension	MCQ

17 ଶହ ଉତ୍ତରୀରେ ପାଣିଆଳ ଉପ ଅନୁଯାୟୀ, ଘର ନ ଥିବା ଚାଷୀ ଯେଉଁମାନେ ଅନ୍ୟ ଗାଁର ଥିଲେ ଏବଂ ଅନ୍ୟ ଛାନରେ ଚାଷ କରୁଥିଲେ ସେମାନଙ୍କୁ କଣ କୁହାଯାଉଥିଲା:

1. ଖୁଦ-କଷିତା
2. ପହି-କଷିତା
3. ମୁକଦମ
4. ମୁଗାରିଆର୍

Options :

- 485584146017. 1
- 485584146018. 2
- 485584146019. 3
- 485584146020. 4

Question Number : 121 Question Id : 48558436506 Question Type : MCQ Option Shuffling : No Is Question Mandatory : No Calculator : None Response Time : N.A Think Time : N.A Minimum Instruction Time : 0

Correct Marks : 5 Wrong Marks : 1

Question Key Details :

Key	Value
Comprehension	MCQ

Identify the **correct** sequence of the chronicles written during the Mughal period.

- A. Akbar Nama
- B. Alangir Nama
- C. Char Chaman
- D. Jahangir Nama
- E. Humayun Nama

Choose the **correct** answer from the options given below:

1. A, C, B, D, E
2. A, D, B, C, E
3. E, A, B, D, C
4. E, A, D, C, B

Options :

- 485584146021. 1
- 485584146022. 2
- 485584146023. 3
- 485584146024. 4

Question Number : 121 Question Id : 48558436506 Question Type : MCQ Option Shuffling : No Is Question Mandatory : No Calculator : None Response Time : N.A Think Time : N.A Minimum Instruction Time : 0

Correct Marks : 5 Wrong Marks : 1

Question Key Details :

Key	Value
Comprehension	MCQ

ମୋଗଲ ସମ୍ରାଜ୍ୟରେ ଲେଖାଯାଇଥିବା ଗ୍ରୋନିକାଲ ବୁକ୍ସକୁ ସଠିକ୍ କ୍ରମରେ ଲେଖନ୍ତୁ:

- A. ଆକବର ନାମା
- B. ଅଇମାତ୍ ଲିଖ ନାମା
- C. ଦାଉ ଉମମ
- D. ଛାହାଙ୍ଗାଲ ନାମା
- E. ହୁମାୟୁନ ନାମା

ନିମ୍ନଲିଖିତ ବିକଳ୍ପ ମଧ୍ୟରୁ ସଠିକ୍ ଉତ୍ତରଟି ଚାଛନ୍ତୁ:

- 1. A, C, B, D, E
- 2. A, D, B, C, E
- 3. E, A, B, D, C
- 4. E, A, D, C, B

Options :

- 485584146021. 1
- 485584146022. 2
- 485584146023. 3
- 485584146024. 4

Question Number : 122 Question Id : 48558436507 Question Type : MCQ Option Shuffling : No Is Question Mandatory : No Calculator : None Response Time : N.A Think Time : N.A Minimum Instruction Time : 0

Correct Marks : 5 Wrong Marks : 1

Question Key Details :

Key	Value
Comprehension	MCQ

Which minister looked after the finances in the Mughal Empire?

- 1. Sadr-us-Sachur
- 2. Diwan-i-Ala
- 3. Mir Bakshi
- 4. Mir Saman

Options :

- 485584146025. 1
- 485584146026. 2
- 485584146027. 3
- 485584146028. 4

Question Number : 122 Question Id : 48558436507 Question Type : MCQ Option Shuffling : No Is Question Mandatory :

No Calculator : None Response Time : N.A Think Time : N.A Minimum Instruction Time : 0

Correct Marks : 5 Wrong Marks : 1

Question Key Details :

Key	Value
Comprehension	MCQ

ମୋଗଲ ସାମ୍ରାଜ୍ୟରେ କେଉଁ ମନ୍ତ୍ରୀ ଅର୍ଥ ବିଭାଗର ତତ୍ତ୍ୱାବଧାନ କରୁଥିଲେ?

1. ସଦର-ଉସ-ସଦୁର
2. ବିଞ୍ଚନ-ଉ-ଅଲ୍ଲା
3. ମିର ବକ୍ସି
4. ମିର ସମନ

Options :

485584146025. 1
485584146026. 2
485584146027. 3
485584146028. 4

Question Number : 123 Question Id : 48558436508 Question Type : MCQ Option Shuffling : No Is Question Mandatory : No Calculator : None Response Time : N.A Think Time : N.A Minimum Instruction Time : 0

Correct Marks : 5 Wrong Marks : 1

Question Key Details :

Key	Value
Comprehension	MCQ

Whom did Akbar honour with the title "Zarrin qalam"?

1. Muhammad Husayn
2. Abul Hasan
3. Payag
4. Abdul Hamid Lahori

Options :

485584146029. 1
485584146030. 2
485584146031. 3
485584146032. 4

Question Number : 123 Question Id : 48558436508 Question Type : MCQ Option Shuffling : No Is Question Mandatory : No Calculator : None Response Time : N.A Think Time : N.A Minimum Instruction Time : 0

Correct Marks : 5 Wrong Marks : 1

Question Key Details :

Key	Value
Comprehension	MCQ

ଆକବର କେଉଁ ବ୍ୟକ୍ତିକୁ "ଜରିନ କାଲମ" ଉପାଧିରେ ସମ୍ମାନିତ କରିଥିଲେ?

1. ମହମଦ ହୁସାଇନ
2. ଅବୁଲ ହସନ
3. ପାଠକ
4. ଅବଦୁଲ ହମିଦ ଲହୋରି

Options :

485584146029. 1
485584146030. 2
485584146031. 3
485584146032. 4

Question Number : 124 Question Id : 48558436509 Question Type : MCQ Option Shuffling : No Is Question Mandatory : No Calculator : None Response Time : N.A Think Time : N.A Minimum Instruction Time : 0

Correct Marks : 5 Wrong Marks : 1

Question Key Details :

Key	Value
Comprehension	MCQ

The Permanent Settlement came into operation in _____.

1. 1864
2. 1757
3. 1793
4. 1800

Options :

485584146033. 1
485584146034. 2
485584146035. 3
485584146036. 4

Question Number : 124 Question Id : 48558436509 Question Type : MCQ Option Shuffling : No Is Question Mandatory : No Calculator : None Response Time : N.A Think Time : N.A Minimum Instruction Time : 0

Correct Marks : 5 Wrong Marks : 1

Question Key Details :

Key	Value
Comprehension	MCQ

ସାତା ବର୍ଷଟି କେବେଠାରୁ କାର୍ଯ୍ୟକାରୀ ହୋଇଥିଲା:

1. 1864
2. 1757
3. 1793
4. 1800

Options :

485584146033. 1
485584146034. 2
485584146035. 3
485584146036. 4

Question Number : 125 Question Id : 48558436510 Question Type : MCQ Option Shuffling : No Is Question Mandatory : No Calculator : None Response Time : N.A Think Time : N.A Minimum Instruction Time : 0

Correct Marks : 5 Wrong Marks : 1

Question Key Details :

Key	Value
Comprehension	MCQ

The Manchester Cotton Company was formed in the year _____.

1. 1857
2. 1858
3. 1859
4. 1860

Options :

485584146037. 1
485584146038. 2
485584146039. 3
485584146040. 4

Question Number : 125 Question Id : 48558436510 Question Type : MCQ Option Shuffling : No Is Question Mandatory : No Calculator : None Response Time : N.A Think Time : N.A Minimum Instruction Time : 0

Correct Marks : 5 Wrong Marks : 1

Question Key Details :

Key	Value
Comprehension	MCQ

ମନେକର ସୂତା କାରଖାନା _____ ମସିହାରେ ଗଠନ କରାଯାଇଥିଲା।

1. 1857
2. 1858
3. 1859
4. 1860

Options :

485584146037. 1
485584146038. 2
485584146039. 3
485584146040. 4

Question Number : 126 Question Id : 48558436511 Question Type : MCQ Option Shuffling : No Is Question Mandatory : No Calculator : None Response Time : N.A Think Time : N.A Minimum Instruction Time : 0

Correct Marks : 5 Wrong Marks : 1

Question Key Details :

Key	Value
Comprehension	MCQ

Before the age of railway, the town of Mirzapur was a collection centre for cotton from which area?

1. Punjab
2. Tamil Nadu
3. Gujarat
4. Deccan

Options :

485584146041. 1
485584146042. 2
485584146043. 3
485584146044. 4

Question Number : 126 Question Id : 48558436511 Question Type : MCQ Option Shuffling : No Is Question Mandatory : No Calculator : None Response Time : N.A Think Time : N.A Minimum Instruction Time : 0

Correct Marks : 5 Wrong Marks : 1

Question Key Details :

Key	Value
Comprehension	MCQ

ବେଳ ସମୟ ପୂର୍ବରୁ, କେଉଁ ଅଞ୍ଚଳରୁ ମିଳାପୁରର ସହର ସୂତା ସଂଗ୍ରହାଳୟ କେନ୍ଦ୍ର ଥିଲା?

1. ପଞ୍ଜାବ
2. ତାମିଲନାଡୁ
3. ଗୁଜୁରାଟ
4. ବେଙ୍ଗାଳ

Options :

485584146041. 1
485584146042. 2
485584146043. 3
485584146044. 4

Question Number : 127 Question Id : 48558436512 Question Type : MCQ Option Shuffling : No Is Question Mandatory : No Calculator : None Response Time : N.A Think Time : N.A Minimum Instruction Time : 0

Correct Marks : 5 Wrong Marks : 1

Question Key Details :

Key	Value
Comprehension	MCQ

Satyajit Ray's film 'Jalshaghar' dealt with the subject matter of _____.

1. India's freedom struggle.
2. The decline of the aristocratic zamindari style of living.
3. Revolt of 1857.
4. Swadeshi Movement in Bengal.

Options :

485584146045. 1
485584146046. 2
485584146047. 3
485584146048. 4

Question Number : 127 Question Id : 48558436512 Question Type : MCQ Option Shuffling : No Is Question Mandatory : No Calculator : None Response Time : N.A Think Time : N.A Minimum Instruction Time : 0

Correct Marks : 5 Wrong Marks : 1

Question Key Details :

Key	Value
Comprehension	MCQ

ସତ୍ୟଜିତ୍ ରାୟଙ୍କର ଚଳଚ୍ଚିତ୍ର 'ରଜସାଗର' କେଉଁ ବିଷୟରେ ଥିଲା:

1. ଭାରତର ସ୍ୱାଧୀନତା ସଂଗ୍ରାମ
2. ସମ୍ରାଜ୍ଞ ଜମିଦାରୀ ଶୈଳୀ ବଞ୍ଚିବାର ଉତ୍ତର
3. 1857 ମସିହା ବିଦ୍ରୋହ
4. ବେଙ୍ଗଲରେ ଶ୍ୱେଦେଶୀ ସତ୍ୟାଗ୍ରହ

Options :

485584146045. 1
485584146046. 2
485584146047. 3
485584146048. 4

Question Number : 128 Question Id : 48558436513 Question Type : MCQ Option Shuffling : No Is Question Mandatory : No Calculator : None Response Time : N.A Think Time : N.A Minimum Instruction Time : 0

Correct Marks : 5 Wrong Marks : 1

Question Key Details :

Key	Value
Comprehension	MCQ

Who organised the zoo which later on became the Calcutta Alipore Zoo?

1. Francis Buchanan
2. Augustus Cornwallis
3. Charles Cornwallis
4. Maharaja Mehtab Chand

Options :

485584146049. 1
485584146050. 2
485584146051. 3
485584146052. 4

Question Number : 128 Question Id : 48558436513 Question Type : MCQ Option Shuffling : No Is Question Mandatory : No Calculator : None Response Time : N.A Think Time : N.A Minimum Instruction Time : 0

Correct Marks : 5 Wrong Marks : 1

Question Key Details :

Key	Value
Comprehension	MCQ

କେଉଁ ବ୍ୟକ୍ତି ଚିଡ଼ିଆଘର ଗଠନ କରିଥିଲେ, ଯାହାକି ପରବର୍ତ୍ତୀ ସମୟରେ କଲକାତା ଅଲିପୁର ଚିଡ଼ିଆଘର ନାମରେ ନାମିତ ହୋଇଥିଲା?

1. ପ୍ରାନ୍ତସିଂହ ବୁଚାନନ୍
2. ଅରବିନ୍ଦ କର୍ଣ୍ଣାଡ଼ିସିଂ
3. ଚାର୍ଲ୍ସ କର୍ଣ୍ଣାଡ଼ିସିଂ
4. ମହାରାଜା ମେହେତାବ ଚାନ୍ଦ

Options :

485584146049. 1
485584146050. 2
485584146051. 3
485584146052. 4

Question Number : 129 Question Id : 48558436514 Question Type : MCQ Option Shuffling : No Is Question Mandatory : No Calculator : None Response Time : N.A Think Time : N.A Minimum Instruction Time : 0

Correct Marks : 5 Wrong Marks : 1

Question Key Details :

Key	Value
Comprehension	MCQ

Where is 'Borah Bazaar' located?

1. Madras
2. Bombay
3. Lucknow
4. Shimla

Options :

485584146053. 1
485584146054. 2
485584146055. 3
485584146056. 4

Question Number : 129 Question Id : 48558436514 Question Type : MCQ Option Shuffling : No Is Question Mandatory : No Calculator : None Response Time : N.A Think Time : N.A Minimum Instruction Time : 0

Correct Marks : 5 Wrong Marks : 1

Question Key Details :

Key	Value
Comprehension	MCQ

ବୋରାହ ବଜାର କେଉଁଠାରେ ଅବସ୍ଥିତ?

1. ମାଦ୍ରାସ
2. ବସ୍ତ୍ର
3. କାଚ୍ଚେରୀ
4. ଗିମଲୀ

Options :

485584146053. 1
485584146054. 2
485584146055. 3
485584146056. 4

Question Number : 130 Question Id : 48558436515 Question Type : MCQ Option Shuffling : No Is Question Mandatory : No Calculator : None Response Time : N.A Think Time : N.A Minimum Instruction Time : 0

Correct Marks : 5 Wrong Marks : 1

Question Key Details :

Key	Value
Comprehension	MCQ

Name the historian who remarked that South Africa was "the making of Mahatma".

1. Lala Lajpat Rai
2. Bal Gangadhar Tilak
3. Chandran Devanesan
4. Abindranath Tagore

Options :

485584146057. 1
485584146058. 2
485584146059. 3
485584146060. 4

Question Number : 130 Question Id : 48558436515 Question Type : MCQ Option Shuffling : No Is Question Mandatory : No Calculator : None Response Time : N.A Think Time : N.A Minimum Instruction Time : 0

Correct Marks : 5 Wrong Marks : 1

Question Key Details :

Key	Value
Comprehension	MCQ

କେଉଁ ଐତିହାସିକ ବ୍ୟକ୍ତି ଦକ୍ଷିଣ ଆଫ୍ରିକା "ମହାତ୍ମାଙ୍କର ଗଠନ" ବୋଲି ବିସ୍ତୃତା ଦେଇଥିଲେ?

1. ଗାନ୍ଧୀ ଜୀବନର ଗାୟକ
2. ବାଲ ଗଙ୍ଗାଧର ତିଲକ
3. ଚନ୍ଦ୍ରନ ବେବେନେଶ୍ୱାରୀ
4. ଚନ୍ଦ୍ରଶେଖର ଆଜାଦ

Options :

485584146057. 1
485584146058. 2
485584146059. 3
485584146060. 4

Question Number : 131 Question Id : 48558436516 Question Type : MCQ Option Shuffling : No Is Question Mandatory : No Calculator : None Response Time : N.A Think Time : N.A Minimum Instruction Time : 0

Correct Marks : 5 Wrong Marks : 1

Question Key Details :

Key	Value
Comprehension	MCQ

Who from among the following nationalist leaders belonged to the group of Moderates?

1. Bipin Chandra Pal
2. Bal Gangadhar Tilak
3. Gopal Krishna Gokhale
4. Chandrashekhar Azad

Options :

485584146061. 1
485584146062. 2
485584146063. 3
485584146064. 4

Question Number : 131 Question Id : 48558436516 Question Type : MCQ Option Shuffling : No Is Question Mandatory : No Calculator : None Response Time : N.A Think Time : N.A Minimum Instruction Time : 0

Correct Marks : 5 Wrong Marks : 1

Question Key Details :

Key	Value
Comprehension	MCQ

ନିମ୍ନଲିଖିତ ମଧ୍ୟରୁ କେଉଁ ଦେଶପ୍ରେମୀ ଜେତା ନରମପଞ୍ଜୀ ବ୍ୟକ୍ତି ମାନଙ୍କ ଚୋଷା ଗ୍ରହ ଜଡ଼ିତ ଥିଲେ?

1. ବିପିନ ଚନ୍ଦ୍ର ପାଲ
2. ବାଲ ଗଜାଧର ତିଲକ
3. ଚୋପାଳ କୃଷ୍ଣ ଗୋଖଲେ
4. ଚନ୍ଦ୍ରଶେଖର ଆଜାଦ

Options :

485584146061. 1
485584146062. 2
485584146063. 3
485584146064. 4

Question Number : 132 Question Id : 48558436517 Question Type : MCQ Option Shuffling : No Is Question Mandatory : No Calculator : None Response Time : N.A Think Time : N.A Minimum Instruction Time : 0

Correct Marks : 5 Wrong Marks : 1

Question Key Details :

Key	Value
Comprehension	MCQ

Who amongst the following were close associates of Gandhi in the years 1917-1922?

- A. Vallabhbhai Patel
- B. Subhas Chandra Bose
- C. Annie Besant
- D. Govind Ballabh Pant
- E. B.R. Ambedkar

Choose the **correct** answer from the options given below:

1. A, C, E only
2. A, B, E only
3. B, D, C only
4. A, B, D only

Options :

485584146065. 1
485584146066. 2
485584146067. 3
485584146068. 4

Question Number : 132 Question Id : 48558436517 Question Type : MCQ Option Shuffling : No Is Question Mandatory : No Calculator : None Response Time : N.A Think Time : N.A Minimum Instruction Time : 0

Correct Marks : 5 Wrong Marks : 1

Question Key Details :

Key	Value
-----	-------

ନିମ୍ନଲିଖିତ ମଧ୍ୟରୁ କେଉଁ ବ୍ୟକ୍ତି ଚଣ୍ଡାଳ ଗାଳୀକର 1917-1922 ମସିହା ମଧ୍ୟରେ ନିର୍ଦ୍ଦିତ ସହକର୍ମୀ ଥିଲେ?

- A. ବଲ୍ଲଭଭାଇ ପଟେଲ
- B. ସୁବାଷ ଚନ୍ଦ୍ର ବୋଷ
- C. ଆରି ବେସାନ୍ତ
- D. ଗୋବିନ୍ଦ ବଲ୍ଲଭ ପଟ୍ଟ
- E. ବି.ଆଇ. ଆମ୍ବେଦକର

ନିମ୍ନଲିଖିତ ଚିହ୍ନ ମଧ୍ୟରୁ ଠିକ୍ ଉତ୍ତରଟି ଚାହନ୍ତୁ:

- 1. କେବଳ A, C, E
- 2. କେବଳ A, B, E
- 3. କେବଳ B, D, C
- 4. କେବଳ A, B, D

Options :

- 485584146065. 1
- 485584146066. 2
- 485584146067. 3
- 485584146068. 4

Question Number : 133 Question Id : 48558436518 Question Type : MCQ Option Shuffling : No Is Question Mandatory : No Calculator : None Response Time : N.A Think Time : N.A Minimum Instruction Time : 0

Correct Marks : 5 Wrong Marks : 1

Question Key Details :

Key	Value
Comprehension	MCQ

Match List I with List II:

LIST I		LIST II	
A.	Dandi March	I.	1917
B.	Khilafat Movement	II.	1942
C.	Quit India Movement	III.	1921
D.	Champaran Movement	IV.	1930

Choose the correct answer from the options given below:

- 1. A-I, B-II, C-III, D-IV
- 2. A-II, B-IV, C-I, D-III
- 3. A-IV, B-III, C-II, D-I
- 4. A-III, B-IV, C-I, D-II

Options :

- 485584146069. 1
- 485584146070. 2
- 485584146071. 3
- 485584146072. 4

Question Number : 133 Question Id : 48558436518 Question Type : MCQ Option Shuffling : No Is Question Mandatory : No Calculator : None Response Time : N.A Think Time : N.A Minimum Instruction Time : 0

Correct Marks : 5 Wrong Marks : 1

Question Key Details :

Key	Value
Comprehension	MCQ

କିଣ୍ଠ I ସହ କିଣ୍ଠ II ମିଶାନ୍ତୁ:-

କିଣ୍ଠ I		କିଣ୍ଠ II	
A.	ହାଣ୍ଡି ମାର୍ଚ୍ଚ	I.	1917
B.	ଭୂଇଁମାଟ୍ ଆନ୍ଦୋଳନ	II.	1942
C.	ଢାଉଡ ଗାଡ ଆନ୍ଦୋଳନ	III.	1921
D.	ଚମ୍ପାରନ ଆନ୍ଦୋଳନ	IV.	1930

ନିମ୍ନଲିଖିତ ଚିହ୍ନଟି ମଧ୍ୟରୁ ସଠିକ୍ ଜଗାଣଣି ବାଛନ୍ତୁ:

1. A-I, B-II, C-III, D-IV
2. A-II, B-IV, C-I, D-III
3. A-IV, B-III, C-II, D-I
4. A-III, B-IV, C-I, D-II

Options :

- 485584146069. 1
- 485584146070. 2
- 485584146071. 3
- 485584146072. 4

Question Number : 134 Question Id : 48558436519 Question Type : MCQ Option Shuffling : No Is Question Mandatory : No Calculator : None Response Time : N.A Think Time : N.A Minimum Instruction Time : 0

Correct Marks : 5 Wrong Marks : 1

Question Key Details :

Key	Value
Comprehension	MCQ

Chronologically arrange the following movements led by Mahatma Gandhi.

- A. Rowlatt Satyagraha
- B. Kheda Movement
- C. Champaran Satyagraha
- D. Ahmedabad Mill Strike
- E. Dandi March

Choose the correct answer from the options given below:

- 1. A, B, C, D, E
- 2. B, D, C, A, E
- 3. C, D, B, A, E
- 4. C, A, B, D, E

Options :

- 485584146073. 1
- 485584146074. 2
- 485584146075. 3
- 485584146076. 4

Question Number : 134 Question Id : 48558436519 Question Type : MCQ Option Shuffling : No Is Question Mandatory : No Calculator : None Response Time : N.A Think Time : N.A Minimum Instruction Time : 0

Correct Marks : 5 Wrong Marks : 1

Question Key Details :

Key	Value
Comprehension	MCQ

ମହାତ୍ମା ଗାନ୍ଧୀଙ୍କ ନେତୃତ୍ୱରେ ହୋଇଥିବା ନିମ୍ନଲିଖିତ ଆନ୍ଦୋଳନ ରୁଚିକୁ ସମୟାବୃତ୍ତୀକ ସଜାଡ଼ି କ୍ରମେକ୍ରମେ:

- A. ଚାଷଲାଭ ସତ୍ୟାଗ୍ରହ
- B. ଖେଡ଼ା ଆନ୍ଦୋଳନ
- C. ଚମ୍ପାରନ ସତ୍ୟାଗ୍ରହ
- D. ଅହମଦାବାଦ ମିଲ୍ ଆନ୍ଦୋଳନ
- E. ଦାଣ୍ଡି ମାର୍ଚ୍ଚ

ନିମ୍ନଲିଖିତ ଚିତ୍ରରୁ ମଧ୍ୟରୁ ସଠିକ୍ କ୍ରମରେ ଚାକରୁ:

- 1. A, B, C, D, E
- 2. B, D, C, A, E
- 3. C, D, B, A, E
- 4. C, A, B, D, E

Options :

- 485584146073. 1
- 485584146074. 2

485584146075. 3
485584146076. 4

Question Number : 135 Question Id : 48558436520 Question Type : MCQ Option Shuffling : No Is Question Mandatory : No Calculator : None Response Time : N.A Think Time : N.A Minimum Instruction Time : 0

Correct Marks : 5 Wrong Marks : 1

Question Key Details :

Key	Value
Comprehension	MCQ

The 'Hindu Mahasabha' was founded in _____.

1. 1917
2. 1915
3. 1916
4. 1919

Options :

485584146077. 1
485584146078. 2
485584146079. 3
485584146080. 4

Question Number : 135 Question Id : 48558436520 Question Type : MCQ Option Shuffling : No Is Question Mandatory : No Calculator : None Response Time : N.A Think Time : N.A Minimum Instruction Time : 0

Correct Marks : 5 Wrong Marks : 1

Question Key Details :

Key	Value
Comprehension	MCQ

ହିନ୍ଦୁ ମହାସଭା କେବେ ସ୍ଥାପିତ ହୋଇଥିଲା?

1. 1917
2. 1915
3. 1916
4. 1919

Options :

485584146077. 1
485584146078. 2
485584146079. 3
485584146080. 4

Question Number : 136 Question Id : 48558436521 Question Type : MCQ Option Shuffling : No Is Question Mandatory : No Calculator : None Response Time : N.A Think Time : N.A Minimum Instruction Time : 0

Correct Marks : 5 Wrong Marks : 1

Question Key Details :

Key	Value
Comprehension	MCQ

On which date did the Constituent Assembly begin its sessions?

1. 6 December 1946
2. 9 December 1946
3. 15 July 1946
4. 16 July 1946

Options :

485584146081. 1
485584146082. 2
485584146083. 3
485584146084. 4

Question Number : 136 Question Id : 48558436521 Question Type : MCQ Option Shuffling : No Is Question Mandatory : No Calculator : None Response Time : N.A Think Time : N.A Minimum Instruction Time : 0

Correct Marks : 5 Wrong Marks : 1

Question Key Details :

Key	Value
Comprehension	MCQ

ସଂସଦର ପ୍ରଥମ ବୈଠକ (ସେସନ୍) କେଉଁ ଦିନ ଆରମ୍ଭ ହୋଇଥିଲା?

1. 6 ଡିସେମ୍ବର 1946
2. 9 ଡିସେମ୍ବର 1946
3. 15 ଜୁଲାଇ 1946
4. 16 ଜୁଲାଇ 1946

Options :

485584146081. 1
485584146082. 2
485584146083. 3
485584146084. 4

Question Number : 137 Question Id : 48558436522 Question Type : MCQ Option Shuffling : No Is Question Mandatory : No Calculator : None Response Time : N.A Think Time : N.A Minimum Instruction Time : 0

Correct Marks : 5 Wrong Marks : 1

Question Key Details :

Key	Value
Comprehension	MCQ

Match List I with List II:

LIST I		LIST II	
A.	Cultural and Educational Rights	I.	Articles 25-28
B.	Right to Equality	II.	Articles 17
C.	Freedom of Religion	III.	Article 14-16
D.	Abolition of Untouchability	IV.	Articles 29,30

Choose the correct answer from the options given below:

1. A-II, B-III, C-IV, D-I
2. A-IV, B-III, C-II, D-I
3. A-I, B-II, C-III, D-IV
4. A-IV, B-III, C-I, D-II

Options :

485584146085. 1
485584146086. 2
485584146087. 3
485584146088. 4

Question Number : 137 Question Id : 48558436522 Question Type : MCQ Option Shuffling : No Is Question Mandatory : No Calculator : None Response Time : N.A Think Time : N.A Minimum Instruction Time : 0

Correct Marks : 5 Wrong Marks : 1

Question Key Details :

Key	Value
Comprehension	MCQ

ଲିଷ୍ଟ I ସହ ଲିଷ୍ଟ II ମିଶାନ୍ତୁ:-

ଲିଷ୍ଟ I		ଲିଷ୍ଟ II	
A.	ସାଂସ୍କୃତିକ ଏବଂ ଶିକ୍ଷାଗତ ଅଧିକାର	I.	ଧାରା 25-28
B.	ସମାନତା ଅଧିକାର	II.	ଧାରା 17
C.	ଧର୍ମଗତ ସ୍ୱାଧୀନତା	III.	ଧାରା 14-16
D.	ଅଦଳଣ୍ୟ ନିବୃତ୍ତି	IV.	ଧାରା 29,30

ନିମ୍ନଲିଖିତ ଠିକ୍ ସମସ୍ତ ସଠିକ୍ ଦମ୍ଭାଣତି ବାନ୍ଧନ୍ତୁ:

1. A-II, B-III, C-IV, D-I
2. A-IV, B-III, C-II, D-I
3. A-I, B-II, C-III, D-IV
4. A-IV, B-III, C-I, D-II

Options :

485584146085. 1
485584146086. 2

485584146087. 3

485584146088. 4

Question Number : 138 Question Id : 48558436523 Question Type : MCQ Option Shuffling : No Is Question Mandatory : No Calculator : None Response Time : N.A Think Time : N.A Minimum Instruction Time : 0

Correct Marks : 5 Wrong Marks : 1

Question Key Details :

Key	Value
Comprehension	MCQ

Who were the two other lawyers serving with B.R. Ambedkar on the Drafting Committee of the Constitution?

- A. K.M. Munshi
- B. B.N Rau
- C. Alladi Krishnaswamy Aiyar
- D. S.N. Mukherjee
- E. Rajendra Prasad

Choose the correct answer from the options given below:

- 1. A, B only
- 2. B, C only
- 3. A, C only
- 4. D, E only

Options :

485584146089. 1

485584146090. 2

485584146091. 3

485584146092. 4

Question Number : 138 Question Id : 48558436523 Question Type : MCQ Option Shuffling : No Is Question Mandatory : No Calculator : None Response Time : N.A Think Time : N.A Minimum Instruction Time : 0

Correct Marks : 5 Wrong Marks : 1

Question Key Details :

Key	Value
Comprehension	MCQ

ସମ୍ବିଧାନର ଡ୍ରାଫଟିଙ୍ଗ କମିଟିରେ ବି.ଆର୍. ଆମ୍ବେଦକରଙ୍କ ଛତ୍ର ଥିବା ଅନ୍ୟ ଦୁଇଜଣ ଓକିଲଙ୍କର ନାମ କଣ ଥିଲା?

- A. କେ.ଏମ୍. ସ୍କାନ୍ସି
- B. ବି.ଏନ୍. ରାଓ
- C. ଆଲ୍ଲାଦି କ୍ରିଷ୍ଣସ୍ୱାମୀ ଆୟର
- D. ଏସ୍.ଏସ୍. ପୁଟ୍ଟାଭୀ
- E. ରାଜେନ୍ଦ୍ର ପ୍ରସାଦ

ନିମ୍ନଲିଖିତ ଚିହ୍ନ ମଧ୍ୟରୁ ସଠିକ୍ ଉତ୍ତରଟି ଚାଛନ୍ତୁ:

- 1. କେବଳ A ଏବଂ B
- 2. କେବଳ B ଏବଂ C
- 3. କେବଳ A ଏବଂ C
- 4. କେବଳ D ଏବଂ E

Options :

- 485584146089. 1
- 485584146090. 2
- 485584146091. 3
- 485584146092. 4

Question Number : 139 Question Id : 48558436524 Question Type : MCQ Option Shuffling : No Is Question Mandatory : No Calculator : None Response Time : N.A Think Time : N.A Minimum Instruction Time : 0

Correct Marks : 5 Wrong Marks : 1

Question Key Details :

Key	Value
Comprehension	MCQ

Arrange the following in a chronological order:

- A. Constituent Assembly begins its session.
- B. Muslim League accepts Cabinet Mission's constitutional scheme.
- C. Muslim League decides to join the Interim Government.
- D. Muslim League announces Direct Action Day.
- E. Muslim League demands dissolution of the Constituent Assembly.

Choose the **correct** answer from the options given below:

- 1. B, D, C, A, E
- 2. B, A, D, C, E
- 3. A, B, C, D, E
- 4. D, A, E, B, C

Options :

- 485584146093. 1

485584146094. 2
485584146095. 3
485584146096. 4

Question Number : 139 Question Id : 48558436524 Question Type : MCQ Option Shuffling : No Is Question Mandatory : No Calculator : None Response Time : N.A Think Time : N.A Minimum Instruction Time : 0

Correct Marks : 5 Wrong Marks : 1

Question Key Details :

Key	Value
Comprehension	MCQ

ନିମ୍ନଲିଖିତ ଗୁଡ଼ିକୁ ସମୟାନୁକ୍ରମିକ ସଜାଡ଼ି ଲେଖନ୍ତୁ:

- A. ସମିଧାନ ସଭାର ସେସନ ଆରମ୍ଭ
- B. ମୁସଲିମ ଲିଗ୍ ଜ୍ୟାଦିନେଟ ମିଶନର ସାମିଧାନିକ ସିଲ୍ ଗ୍ରହଣ
- C. ମୁସଲିମ ଲିଗ୍ ର ମଧ୍ୟକାଳୀନ ସରକାର ଯୋଗଦେବା ବିଚାର
- D. ମୁସଲିମ ଲିଗ୍ ର ସିଧା କାର୍ଯ୍ୟ ବିବସ ଗୋଷ୍ଠୀ
- E. ମୁସଲିମ ଲିଗ୍ ର ସମିଧାନ ସଭାର ଉଦ୍ଘାଟନ

ନିମ୍ନଲିଖିତ ବିକଳ୍ପ ମଧ୍ୟରୁ ସଠିକ୍ ଉତ୍ତରଟି ଚାନ୍ତନ୍ତୁ:

- 1. B, D, C, A, E
- 2. B, A, D, C, E
- 3. A, B, C, D, E
- 4. D, A, E, B, C

Options :

485584146093. 1
485584146094. 2
485584146095. 3
485584146096. 4

Question Number : 140 Question Id : 48558436525 Question Type : MCQ Option Shuffling : No Is Question Mandatory : No Calculator : None Response Time : N.A Think Time : N.A Minimum Instruction Time : 0

Correct Marks : 5 Wrong Marks : 1

Question Key Details :

Key	Value
Comprehension	MCQ

Which of the following statements are **True** for the Constituent Assembly?

- A. It was boycotted by the Muslim League.
- B. It was elected by Universal Franchise.
- C. Its members were chosen by Provincial Legislatures.
- D. Majority of its members belonged to the Socialist Party.
- E. Constituent Assembly was dominated by three parties.

Choose the **correct** answer from the options given below:

- 1. A, E only
- 2. B, D only
- 3. A, C only
- 4. B, E only

Options :

- 485584146097. 1
- 485584146098. 2
- 485584146099. 3
- 485584146100. 4

Question Number : 140 Question Id : 48558436525 Question Type : MCQ Option Shuffling : No Is Question Mandatory : No Calculator : None Response Time : N.A Think Time : N.A Minimum Instruction Time : 0

Correct Marks : 5 Wrong Marks : 1

Question Key Details :

Key	Value
Comprehension	MCQ

ସମିଧାନ ସଭା କାହି ନିମ୍ନଲିଖିତ ମଧ୍ୟରୁ କେଉଁ ଗଠିତ ସଭା ଅଟେ?

- A. ଏହା ମୁସଲିମ ଲିଗ୍ ଦ୍ୱାରା ବୟକଟ (ବାସନ୍ଦ) କରାଯାଇଥିଲା
- B. ଏହା ସୁନିର୍ଦ୍ଦେଶିତ ପ୍ରାକ୍ତାଳିତ ଦ୍ୱାରା ନିର୍ଦ୍ଧାରିତ ହୋଇଥିଲା
- C. ଏହାର ସଭ୍ୟମାନେ ପ୍ରୋଭିନ୍ସିଆଲ ଗାନ୍ଧିଜୀ ବ୍ୟବସ୍ଥାପକ ସଭା ଦ୍ୱାରା ବୟକଟ ହୋଇଥିଲେ
- D. ଏହାର ବହୁ ସଂଖ୍ୟକ ସଭ୍ୟ ସମାଜବାଦୀ ଦଳରୁ ଥିଲେ
- E. ସମିଧାନ ସଭା ତିନି ଦଳଙ୍କ ଦ୍ୱାରା ନିୟନ୍ତ୍ରିତ ହେଇଥିଲା

ନିମ୍ନଲିଖିତ ବିବକ୍ତ ମଧ୍ୟରୁ ସଠିକ୍ ଉତ୍ତରଟି ଚାହନ୍ତୁ:

- 1. କେବଳ A ଏବଂ E
- 2. କେବଳ B ଏବଂ D
- 3. କେବଳ A ଏବଂ C
- 4. କେବଳ B ଏବଂ E

Options :

- 485584146097. 1

485584146098. 2
485584146099. 3
485584146100. 4

Sub-Section Number : 2
Sub-Section Id : 4855842697
Question Shuffling Allowed : No
Is Section Default? : null

Question Number : 141 Question Id : 48558436526 Question Type : MCQ Option Shuffling : No Is Question Mandatory : No Calculator : None Response Time : N.A Think Time : N.A Minimum Instruction Time : 0

Correct Marks : 5 Wrong Marks : 1

Question Key Details :

Key	Value
Comprehension	Comp1

Read the passage and answer the questions :

According to Buddhist philosophy, the world is transient (anicca) and constantly changing; it is also soulless (anatta) as there is nothing permanent or eternal in it. Within this transient world, sorrow (dukkha) is intrinsic to human existence. It is by following the path of moderation between severe penance and self indulgence that human beings can rise above these worldly troubles. In the earliest forms of Buddhism whether or not god existed was irrelevant.

Which of the following statement is NOT True regarding the Buddhist philosophy?

1. The world is transient and constantly changing.
2. Sorrow is intrinsic to human existence.
3. Humans can rise above sorrow by following the path of severe penance and self-indulgence.
4. The world is soulless as there is nothing permanent or eternal in it.

Options :

485584146101. 1
485584146102. 2
485584146103. 3
485584146104. 4

Question Number : 141 Question Id : 48558436526 Question Type : MCQ Option Shuffling : No Is Question Mandatory : No Calculator : None Response Time : N.A Think Time : N.A Minimum Instruction Time : 0

Correct Marks : 5 Wrong Marks : 1

Question Key Details :

Key	Value
Comprehension	Comp1

ନିମ୍ନଲିଖିତ ପ୍ୟାସେଜକୁ ପଢନ୍ତୁ ଏବଂ ଭଲର ଲେଖକ:

ବୌଦ୍ଧ ଦର୍ଶନ ଶାସ୍ତ୍ର ଅନୁଯାୟୀ, ଏହି ବିଶ୍ୱ କ୍ଷଣସାଥୀ ଏବଂ ସର୍ବଦା ପରିବର୍ତ୍ତନଶୀଳ; ଏହା ନୀରସ ମଧ୍ୟ କାରଣ ଏଠାରେ କିଛି ବି ସ୍ଥାୟୀ ବା ଶାଶ୍ୱତ ନୁହେଁ। ଏହି କ୍ଷଣସାଥୀ ଦୁନିଆରେ ଦୁଃଖ ମାନବ ଅଭିଭୂତ କାରୀ ଅନ୍ତର୍ନିହିତ। ପାପ ମୋଚନ ପାଇଁ ସ୍ୱୟଂକୃତ ପ୍ରାୟଶ୍ଚିତ ଏବଂ ସ୍ୱୟଂ ପରିତୋଷ ମଧ୍ୟରେ, ଯଥାଯଥ ଭାବେ ନିୟନ୍ତ୍ରଣର ପଥ, ଯାହା ଦ୍ୱାରା ମନୁଷ୍ୟମାନେ ସାଂସାରିକ ଜ୍ୱରକୁ ଉପରକୁ ଉଠିପାରିବେ। ବୌଦ୍ଧଧର୍ମରେ ପ୍ରାରମ୍ଭରେ ଉତ୍ସରଜର ଅସିଦ୍ଧ ର ବିଷୟ ଅବଗତ ଥିଲା।

ନିମ୍ନଲିଖିତ ମଧ୍ୟରୁ କେଉଁଟି ବୌଦ୍ଧ ଦର୍ଶନଶାସ୍ତ୍ର ବିଷୟରେ ସଠିକ୍ ନୁହେଁ?

1. ଏହି ବିଶ୍ୱ କ୍ଷଣସାଥୀ ଏବଂ ସର୍ବଦା ପରିବର୍ତ୍ତନଶୀଳ
2. ଦୁଃଖ ମାନବ ସ୍ୱାଧିଭୂତ ଅନ୍ତର୍ନିହିତ
3. ମନୁଷ୍ୟ ଦୁଃଖର ଉପରକୁ ଉଠିପାରିବ ଅତ୍ୟଧିକ ସ୍ୱୟଂକୃତ ପ୍ରାୟଶ୍ଚିତ ଏବଂ ସ୍ୱୟଂ ପରିତୋଷ ର ପଥ ଅନୁସରଣ କରି
4. ଏହି ବିଶ୍ୱ ନୀରସ ଯେହେତୁ ଏଠାରେ କିଛିଟି ସ୍ଥାୟୀ ବିପ୍ଳା ଶାଶ୍ୱତ ନୁହେଁ

Options :

485584146101. 1
485584146102. 2
485584146103. 3
485584146104. 4

Question Number : 142 Question Id : 48558436527 Question Type : MCQ Option Shuffling : No Is Question Mandatory : No Calculator : None Response Time : N.A Think Time : N.A Minimum Instruction Time : 0

Correct Marks : 5 Wrong Marks : 1

Question Key Details :

Key	Value
Comprehension	Compl

Read the passage and answer the questions :

According to Buddhist philosophy, the world is transient (anicca) and constantly changing; it is also soulless (anatta) as there is nothing permanent or eternal in it. Within this transient world, sorrow (dukkha) is intrinsic to human existence. It is by following the path of moderation between severe penance and self indulgence that human beings can rise above these worldly troubles. In the earliest forms of Buddhism whether or not god existed was irrelevant.

Which of the following idea is NOT a part of the teachings of the Buddha?

1. Importance of right conduct and values.
2. Claims of superiority based on birth.
3. Metta (fellow feeling).
4. Karuna (compassion).

Options :

- 485584146105. 1
- 485584146106. 2
- 485584146107. 3
- 485584146108. 4

Question Number : 142 Question Id : 48558436527 Question Type : MCQ Option Shuffling : No Is Question Mandatory : No Calculator : None Response Time : N.A Think Time : N.A Minimum Instruction Time : 0

Correct Marks : 5 Wrong Marks : 1

Question Key Details :

Key	Value
Comprehension	Comp1

ନିମ୍ନଲିଖିତ ପ୍ୟାରେଗ୍ରାଫକୁ ପଢନ୍ତୁ ଏବଂ ଉତ୍ତର ଲେଖନ୍ତୁ:

ବୌଦ୍ଧ ଦର୍ଶନ ଶାସ୍ତ୍ର ଅନୁଯାୟୀ, ଏହି ବିଶ୍ୱ ଶ୍ୱେତାକ୍ଷରୀ ଏବଂ ସର୍ବଦା ପରିବର୍ତ୍ତନଶୀଳ; ଏହା କାଳକ୍ରମେ ମଧ୍ୟ କାଳକ୍ରମେ ଏଠାରେ କିଛି ବି କ୍ଷାୟୀ ବା ଶାଶ୍ୱତ ନୁହେଁ। ଏହି ଶ୍ୱେତାକ୍ଷରୀ ଦୁନିଆରେ ଦୁଃଖ ମାନବ ଅସିଦ୍ଧ ଜାତି ଅନ୍ତର୍ଭୁକ୍ତ। ପାପ ମୋଚନ ପାଇଁ ସ୍ୱୟଂକୁଳ ପ୍ରାୟଶ୍ଚିତ ଏବଂ ସ୍ୱୟଂ ପରିତ୍ୟାଗ ମଧ୍ୟରେ, ଯଥାଯଥ ଗାଢେ ନିୟନ୍ତ୍ରଣର ପଥ, ଯାହା ଦ୍ୱାରା ମନୁଷ୍ୟମାନେ ସାଂସାରିକ ଦୁଃଖରୁ ଉପରକୁ ଉଠିପାରିବେ। ବୌଦ୍ଧଧର୍ମରେ ପ୍ରାରମ୍ଭରେ ଉତ୍ତରାକର ଅସିଦ୍ଧ ର ବିଷୟ ଅବଗତ ଥିଲା।

ନିମ୍ନଲିଖିତ ମଧ୍ୟରୁ କେଉଁ ବିବରଣୀ ଦୁଇ ଶିକ୍ଷାର ଅଂଶ ନୁହେଁ?

1. ଭଜନ ବ୍ୟବହାର ଏବଂ ମୂଲ୍ୟର ସ୍ୱରୂପ
2. କର ଅନୁଯାୟୀ ଶ୍ରେଣୀଭାଗ ଦାବି
3. ସହାୟତା
4. କରୁଣା

Options :

- 485584146105. 1
- 485584146106. 2
- 485584146107. 3
- 485584146108. 4

Question Number : 143 Question Id : 48558436528 Question Type : MCQ Option Shuffling : No Is Question Mandatory : No Calculator : None Response Time : N.A Think Time : N.A Minimum Instruction Time : 0

Correct Marks : 5 Wrong Marks : 1

Question Key Details :

Key	Value
Comprehension	Comp1

Read the passage and answer the questions :

According to Buddhist philosophy, the world is transient (anicca) and constantly changing; it is also soulless (anatta) as there is nothing permanent or eternal in it. Within this transient world, sorrow (dukkha) is intrinsic to human existence. It is by following the path of moderation between severe penance and self indulgence that human beings can rise above these worldly troubles. In the earliest forms of Buddhism whether or not god existed was irrelevant.

In Buddhism, the followers of the older tradition, who followed the old path and respected teachers, described themselves as:

1. Theravadins
2. Mahayanas
3. Taravadins
4. Tantrics

Options :

- 485584146109. 1
- 485584146110. 2
- 485584146111. 3
- 485584146112. 4

Question Number : 143 Question Id : 48558436528 Question Type : MCQ Option Shuffling : No Is Question Mandatory : No Calculator : None Response Time : N.A Think Time : N.A Minimum Instruction Time : 0

Correct Marks : 5 Wrong Marks : 1

Question Key Details :

Key	Value
Comprehension	Comp1

ନିମ୍ନଲିଖିତ ପ୍ୟାସେଜଟିକୁ ପଢନ୍ତୁ ଏବଂ ଉତ୍ତର ଲେଖନ୍ତୁ:

ବୌଦ୍ଧ ଚର୍ଚ୍ଚନ ଶାସ୍ତ୍ର ଅନୁଯାୟୀ, ଏହି ବିଶ୍ୱ କ୍ଷଣସାୟୀ ଏବଂ ସର୍ବଦା ପରିବର୍ତ୍ତନଶୀଳ; ଏହା ନୀରସ ମଧ୍ୟ କାରଣ ଏଠାରେ କିଛି ବି କ୍ଷାୟୀ ବା ଶାଶ୍ୱତ ନୁହେଁ। ଏହି କ୍ଷଣସାୟୀ ଦୁନିଆରେ ଦୁଃଖ ମାନବ ଅଭିଭୂତ କାରୀ ଅନ୍ତର୍ନିହିତ। ପାପ ମୋଚନ ପାଇଁ ସ୍ୱୟଂକୃତ ପ୍ରାୟଶ୍ଚିତ ଏବଂ ସ୍ୱୟଂ ପରିତ୍ୟାଗ ମଧ୍ୟରେ, ଯଥାଯଥ ଭାବେ ନିୟନ୍ତ୍ରଣର ପଥ, ଯାହା ଦ୍ୱାରା ମନୁଷ୍ୟମାନେ ସାଂସାରିକ ଦୁଃଖରୁ ଉପରକୁ ଉଠିପାରିବେ। ବୌଦ୍ଧଧର୍ମରେ ପ୍ରାରମ୍ଭରେ ଇଶ୍ୱରଙ୍କର ଅସ୍ତିତ୍ୱ ର ବିଷୟ ଅସ୍ପଷ୍ଟ ଥିଲା।

ବୌଦ୍ଧ ଅର୍ଥରେ ପୁରୁଣା ପରମ୍ପରାକୁ ଅନୁସରଣ କରୁଥିବା ଏବଂ ପ୍ରାଚୀନ ପଥକୁ ଅନୁସରଣ କରୁଥିବା ଚିନ୍ତକମାନେ ନିଜକୁ ବର୍ଣ୍ଣନା କରୁଥିଲେ, ଯଥା:

1. ଶୂନ୍ୟବାଦିନ
2. ମହାୟାନ
3. ଭାଗାବାଦିନ
4. ଚାନ୍ଦ୍ରିକ

Options :

485584146109. 1
485584146110. 2
485584146111. 3
485584146112. 4

Question Number : 144 Question Id : 48558436529 Question Type : MCQ Option Shuffling : No Is Question Mandatory : No Calculator : None Response Time : N.A Think Time : N.A Minimum Instruction Time : 0

Correct Marks : 5 Wrong Marks : 1

Question Key Details :

Key	Value
Comprehension	Comp1

Read the passage and answer the questions :

According to Buddhist philosophy, the world is transient (anicca) and constantly changing; it is also soulless (anatta) as there is nothing permanent or eternal in it. Within this transient world, sorrow (dukkha) is intrinsic to human existence. It is by following the path of moderation between severe penance and self indulgence that human beings can rise above these worldly troubles. In the earliest forms of Buddhism whether or not god existed was irrelevant.

Where did Gautama Buddha attain 'nibbana'?

1. Lumbini
2. Rajgriha
3. Samath
4. Kusinagara

Options :

485584146113. 1
485584146114. 2
485584146115. 3
485584146116. 4

Question Number : 144 Question Id : 48558436529 Question Type : MCQ Option Shuffling : No Is Question Mandatory : No Calculator : None Response Time : N.A Think Time : N.A Minimum Instruction Time : 0

Correct Marks : 5 Wrong Marks : 1

Question Key Details :

Key	Value
Comprehension	Comp1

ନିମ୍ନଲିଖିତ ପ୍ୟାସେଜକୁ ପଢନ୍ତୁ ଏବଂ ଉତ୍ତର ଲେଖନ୍ତୁ:

ବୌଦ୍ଧ ଦର୍ଶନ ଶାସ୍ତ୍ର ଅନୁଯାୟୀ, ଏହି ବିଶ୍ୱ ଶ୍ୱେତାକ୍ଷରୀ ଏବଂ ସର୍ବଦା ପରିବର୍ତ୍ତନଶୀଳ; ଏହା ନୀରସ ମଧ୍ୟ କାରଣ ଏଠାରେ କିଛି ବି କ୍ଷୟା ବା ଶାଶ୍ୱତ ବୃତ୍ତାନ୍ତ ନାହିଁ। ଏହି ଶ୍ୱେତାକ୍ଷରୀ ଦୁନିଆରେ ଦୁଃଖ ମାନତ ଅଭିଭୂତ ଲାଗି ଅନ୍ତର୍ନିହିତ। ପାପ ମୋଚନ ପାଇଁ ସ୍ୱୟଂକୁତ ପ୍ରାୟଶ୍ଚିତ ଏବଂ ସ୍ୱୟଂ ପରିତ୍ୟାଗ ମଧ୍ୟରେ, ଯଥାଯଥ ଭାବେ ନିୟନ୍ତ୍ରଣର ପଥ, ଯାହା ଦ୍ୱାରା ମନୁଷ୍ୟମାନେ ସାଂସାରିକ ଦୁଃଖରୁ ଉପରକୁ ଉଠିପାରିବେ। ବୌଦ୍ଧଧର୍ମରେ ପ୍ରାରମ୍ଭରେ ଉତ୍ସରଜର ଅସ୍ଥିତ ର ବିଷୟ ଅବଗତ ଥିଲା।

କୌତମ ଦୁଃଖ କେଉଁଠାରେ ନିର୍ବାଣ ପ୍ରାପ୍ତ କରିଥିଲେ?

1. କୁମିନା
2. ଭାଜବୁଦ୍ଧ
3. ସାରନାଥ
4. କୃଷିନରକ

Options :

485584146113. 1
 485584146114. 2
 485584146115. 3
 485584146116. 4

Question Number : 145 Question Id : 48558436530 Question Type : MCQ Option Shuffling : No Is Question Mandatory : No Calculator : None Response Time : N.A Think Time : N.A Minimum Instruction Time : 0

Correct Marks : 5 Wrong Marks : 1

Question Key Details :

Key	Value
Comprehension	Comp1

Read the passage and answer the questions :

According to Buddhist philosophy, the world is transient (anicca) and constantly changing; it is also soulless (anatta) as there is nothing permanent or eternal in it. Within this transient world, sorrow (dukkha) is intrinsic to human existence. It is by following the path of moderation between severe penance and self indulgence that human beings can rise above these worldly troubles. In the earliest forms of Buddhism whether or not god existed was irrelevant.

Which of the following statements are **True** about the teachings of Buddha?

- A. The Buddha regarded the social world as of divine origin.
- B. The Buddha advised kings and gahapatis to be humane and ethical.
- C. The Buddha believed that collective effort was required to transform social relations.
- D. The Buddha emphasised individual agency and righteous action to escape from the cycle of birth.
- E. The Buddha asserted that the extinguishing of ego and desire would end the cycle of suffering.

Choose the **correct** answer from the options given below:

- 1. C, D, E only
- 2. B, C, D only
- 3. A, B, D only
- 4. B, D, E only

Options :

- 485584146117. 1
- 485584146118. 2
- 485584146119. 3
- 485584146120. 4

Question Number : 145 Question Id : 48558436530 Question Type : MCQ Option Shuffling : No Is Question Mandatory : No Calculator : None Response Time : N.A Think Time : N.A Minimum Instruction Time : 0

Correct Marks : 5 Wrong Marks : 1

Question Key Details :

Key	Value
Comprehension	Compl

ନିମ୍ନଲିଖିତ ପ୍ୟାରେକଟିକୁ ପଢନ୍ତୁ ଏବଂ ଭଲର ଭେଟାନ୍ତୁ:

ବୌଦ୍ଧ ଦର୍ଶନ ଶାସ୍ତ୍ର ଅନୁଯାୟୀ, ଏହି ବିଶ୍ୱ ଶ୍ରେଣୀଭାବୀ ଏବଂ ସର୍ବଦା ପରିବର୍ତ୍ତନଶୀଳ; ଏହା ନୀତିସମ୍ମତ ନ୍ୟାୟ କାରଣ ଏଠାରେ କିଛି ବିଶ୍ୱାସୀ ବା ଶାଶ୍ୱତ ନୁହେଁ। ଏହି ଶ୍ରେଣୀଭାବୀ ଦୁନିଆରେ ଦୁଃଖ ମାନବ ଅସ୍ଥିତ ଜାତି ଅନ୍ତର୍ଭୁକ୍ତ। ପାପ ମୋଚନ ପାଇଁ ସ୍ୱୟଂକୁତ ପ୍ରାୟଶ୍ଚିତ ଏବଂ ସ୍ୱୟଂ ପରିତ୍ୟାଗ ମଧ୍ୟରେ, ସଂଯାମିତ ଭାବେ ନିୟନ୍ତ୍ରଣର ପଥ, ଯାହା ଦ୍ୱାରା ମନୁଷ୍ୟମାନେ ସାଂସାରିକ ଦୁଃଖରୁ ଉପରକୁ ଉଠିପାରିବେ। ବୌଦ୍ଧଧର୍ମରେ ପ୍ରାରମ୍ଭରେ ଉତ୍ତରାଧିକାର ଅସ୍ଥିତ ର ବିଷୟ ଅବଗତ ଥିଲା।

ନିମ୍ନଲିଖିତ ମଧ୍ୟରୁ କେଉଁ ଭଲି ଗୁଡ଼ିକ ବୁଦ୍ଧିମତ ଶିକ୍ଷା ବିଭାଗରେ ସତ୍ୟ ଅଟେ?

- A. ବୁଦ୍ଧିଜୀବୀମାନଙ୍କୁ ସାମାଜିକ ଦୁନିଆ ଛାଡ଼ିବାକୁ ଚାହୁଁଥିବା
- B. ବୁଦ୍ଧିଜୀବୀମାନଙ୍କୁ ଏବଂ ଗୃହପତିମାନଙ୍କୁ ନ୍ୟାୟଶୀଳ ହେବାକୁ ଉପଦେଶ ଦେବାକୁ
- C. ବୁଦ୍ଧିଜୀବୀମାନଙ୍କୁ କରୁଥିବା ଯେ ସାମାଜିକ ଉପାଦାନକୁ ଉଦ୍‌ଘୋଷଣା ପାଇଁ ଏକକ୍ରିତ କାର୍ଯ୍ୟାନୁଷ୍ଠାନ କରୁଥାନ୍ତା
- D. ଉଚ୍ଚ ମୂଲ୍ୟର ଚକ୍ରରୁ ବଞ୍ଚିବା ପାଇଁ ବୁଦ୍ଧିଜୀବୀମାନଙ୍କୁ ଏବଂ ଉଚ୍ଚ ଜମି ଉପରେ ସ୍ୱତନ୍ତ୍ର ଦେଖିବାକୁ
- E. ବୁଦ୍ଧିଜୀବୀମାନଙ୍କୁ ଯେ ଗର୍ବ ଏବଂ ଗର୍ଭା ଲୋପ ପାଇଲେ ଯତ୍ନଶୀଳ ଚକ୍ରରୁ ସୁଧି ନିର୍ଦ୍ଦିଷ୍ଟ

ନିମ୍ନଲିଖିତ ଠିକ୍ ମଧ୍ୟରୁ ଠିକ୍ ଉତ୍ତର ଚାହୁଁ

- 1. କେବଳ C, D, E
- 2. କେବଳ B, C, D
- 3. କେବଳ A, B, D
- 4. କେବଳ B, D, E

Options :

- 485584146117. 1
- 485584146118. 2
- 485584146119. 3
- 485584146120. 4

Sub-Section Number : 3
Sub-Section Id : 4855842698
Question Shuffling Allowed : No
Is Section Default? : null

Question Number : 146 Question Id : 48558436531 Question Type : MCQ Option Shuffling : No Is Question Mandatory : No Calculator : None Response Time : N.A Think Time : N.A Minimum Instruction Time : 0
Correct Marks : 5 Wrong Marks : 1

Question Key Details :

Key	Value
Comprehension	Comp2

Read the passage and answer the questions :

Section I - Regarding Zemindars. It is evident that the British Government in making zemindary settlement have imposed exorbitant *Jumas* (revenue demand) and have disgraced and ruined several Zemindars by putting up their estates for public auction for arrears of rent, in so much, in the institution of a suit by a common Ryot, a maid servant or a slave, the respectable Zemindars are summoned into court, arrested, put in goal and disgraced. In litigation regarding Zemindaries, the immense value of stamps, and other unnecessary expenses of the civil courts... are all calculated to impoverish the litigants. Besides this, the coffers of the Zemindars are annually taxed with the subscription for schools, hospitals, roads, etc. Such extortions will have no manner of existence in the Badshahi Government; but on the contrary the *Jumas* will be light, the dignity and honour of the Zemindars safe, and every Zemindar will have absolute rule in his own Zemindary...

This excerpt has been taken from:

1. Bijnaur Proclamation of 1857
2. Kanpur Proclamation of 1857
3. Azamgarh Proclamation of 1857
4. Lucknow Proclamation of 1857

Options :

485584146121. 1
485584146122. 2
485584146123. 3
485584146124. 4

Question Number : 146 Question Id : 48558436531 Question Type : MCQ Option Shuffling : No Is Question Mandatory : No Calculator : None Response Time : N.A Think Time : N.A Minimum Instruction Time : 0

Correct Marks : 5 Wrong Marks : 1

Question Key Details :

Key	Value
Comprehension	Comp2

ନିମ୍ନଲିଖିତ ଅନୁଛେଦଟିକୁ ପଢ଼ନ୍ତୁ ଏବଂ ଉତ୍ତର ଲେଖନ୍ତୁ:

ଏହା ଶତ୍ରୁ ସେ ଦ୍ଵିତୀୟ ସରକାର ଜମିଦାରୀ ଯାଯା ବ୍ୟବସ୍ଥା କରିବାରେ ଅତ୍ୟଧିକ ମାତ୍ରାରେ କର ଆଦାୟ କରିଥିଲେ ଏବଂ ବହୁ ଜମିଦାରକୁ ଅପମାନ ଏବଂ ତାଙ୍କର ସମ୍ପତ୍ତି ନଷ୍ଟ କରିଦେଇଥିଲେ, ତାଙ୍କର ସମ୍ପତ୍ତିକୁ ନିଲୀନ କରାଯାଇଥିଲା ଯାହାଦ୍ଵାରା ସେମାନେ ବାକି ରତ୍ନ ଆଦାୟ କରିପାରିଥିଲେ, ଏବଂ ସାଧାରଣ ଗରୀବଙ୍କୁ ହାତୀ ମକଦ୍ଦମା ହୁକୁ କରି ସେମାନଙ୍କୁ କ୍ରିତଦାୟ ଭାବେ ବ୍ୟବହାର କରାଯାଇଥିଲା। ସମ୍ମାନୀୟ ଜମିଦାର ମାନଙ୍କୁ ବିଚାରାଳୟକୁ ଡକା ଯାଇଥିଲା ଏବଂ ସେମାନେ କରାଯାଇଥିଲା। ଦେଖାଗଲା କୋର୍ଟର ଅଦରଜାରୀ ଖର୍ଚ୍ଚ ଏବଂ ଅତ୍ୟଧିକ ମାତ୍ରାରେ ଶାଫ୍ଟ ଜମିଦାର ମାନଙ୍କୁ ଅଧିକ ଦରିଦ୍ର କରିବା ପାଇଁ ଫିସାବ କରାଯାଇଥିଲା। ଏହା ବ୍ୟତୀତ ଜମିଦାର ମାନଙ୍କର କଫର (କୋଷ୍ଠ) ଗୁଡ଼ିକରୁ ବାର୍ଷିକ କର ଆଦାୟ କରାଯାଇଥିଲା ଯାହାକି ବିଦ୍ୟାଳୟ, ଚିକିତ୍ସାଳୟ ଏବଂ ରାଷ୍ଟ୍ର ବାବଦରେ ନିଆଯାଇଥିଲା। ବାବଶାହି ସରକାରରେ ଏହି ନୁହେଁ କୌଣସି ଉଲ୍ଲେଖ ନାହିଁ। ଏହାର ବିପରୀତ, ଜମ୍ ନୂହ୍ୟର କର ଏବଂ ସମସ୍ତ ଜମିଦାର ନିଜ ଜମିଦାରୀର ସମ୍ପୂର୍ଣ୍ଣ ଖାସକ ଥିଲେ।

ଏହି ଅନୁଛେଦଟି କେଉଁଠାରୁ ସିଆଯାଇଛି:

1. 1857 ମସିହା ବିକନର ପ୍ରୋକ୍ଲମେସନ
2. 1857 ମସିହା କାନପୁର ପ୍ରୋକ୍ଲମେସନ
3. 1857 ମସିହା ଆଜମଗଡ଼ ପ୍ରୋକ୍ଲମେସନ
4. 1857 ମସିହା ଲୁକ୍ନୋ ପ୍ରୋକ୍ଲମେସନ

Options :

485584146121. 1
485584146122. 2
485584146123. 3
485584146124. 4

Question Number : 147 Question Id : 48558436532 Question Type : MCQ Option Shuffling : No Is Question Mandatory : No Calculator : None Response Time : N.A Think Time : N.A Minimum Instruction Time : 0
Correct Marks : 5 Wrong Marks : 1

Question Key Details :

Key	Value
Comprehension	Comp2

Read the passage and answer the questions :

Section I - Regarding Zemindars. It is evident that the British Government in making zemindary settlement have imposed exorbitant *Jumas* (revenue demand) and have disgraced and ruined several Zemindars by putting up their estates for public auction for arrears of rent, in so much, in the institution of a suit by a common Ryot, a maid servant or a slave, the respectable Zemindars are summoned into court, arrested, put in goal and disgraced. In litigation regarding Zemindaries, the immense value of stamps, and other unnecessary expenses of the civil courts... are all calculated to impoverish the litigants. Besides this, the coffers of the Zemindars are annually taxed with the subscription for schools, hospitals, roads, etc. Such extortions will have no manner of existence in the Badshahi Government; but on the contrary the *Jumas* will be light, the dignity and honour of the Zemindars safe, and every Zemindar will have absolute rule in his own Zemindary...

"Section I" of the Proclamation addresses to which class?

1. Service gentry class
2. Land holding class
3. Merchant-commercial class
4. Artisans and peasants

Options :

- 485584146125. 1
- 485584146126. 2
- 485584146127. 3
- 485584146128. 4

Question Number : 147 Question Id : 48558436532 Question Type : MCQ Option Shuffling : No Is Question Mandatory : No Calculator : None Response Time : N.A Think Time : N.A Minimum Instruction Time : 0

Correct Marks : 5 Wrong Marks : 1

Question Key Details :

Key	Value
Comprehension	Comp2

ନିମ୍ନଲିଖିତ ଅନୁଛେଦଟିକୁ ପଢ଼ନ୍ତୁ ଏବଂ ଉତ୍ତର ଲେଖନ୍ତୁ:

ଏହା ଲକ୍ଷ ଯେ ବ୍ରିଟିଶ ସରକାର ଜମିଦାରୀ ସାଧା ବ୍ୟବସ୍ଥା କରିବାରେ ଅତ୍ୟଧିକ ମାତ୍ରାରେ ଜର ଆଦାୟ କରିଥିଲେ ଏବଂ ତତ୍ତ୍ୱ ଜମିଦାରକୁ ଅପମାନ ଏବଂ ତାଙ୍କର ସମ୍ପତ୍ତି ନଷ୍ଟ କରିଦେଇଥିଲେ, ତାଙ୍କର ସମ୍ପତ୍ତିକୁ ନିରାମ କରାଯାଇଥିଲା ଯାହାଦ୍ୱାରା ସେମାନେ ବାକି ରତ୍ତା ଆଦାୟ କରିପାରିଥିଲେ, ଏବଂ ସାଧାରଣ ଗରୀବଙ୍କ ପ୍ରାୟ ମବଦମ୍ମା ହୁଏ କିମ୍ବା ସେମାନଙ୍କୁ କ୍ରିତବାସ ଭାବେ ବ୍ୟବହାର କରାଯାଇଥିଲା । ସମ୍ଭାବ୍ୟ ଜମିଦାର ମାନଙ୍କୁ ବିଚାରାଳୟକୁ ଡକାଇ ଯାଇଥିଲା ଏବଂ ସମା ମଧ୍ୟ କରାଯାଇଥିଲା । ତେଣୁ ଜୋଡ଼ର ଅବରଜାରା ଖର୍ଚ୍ଚ ଏବଂ ଅତ୍ୟଧିକ ମାତ୍ରାରେ ଖାସ୍ତା ଜମିଦାର ମାନଙ୍କୁ ଅଧିକ ଦରିଦ୍ର କରିବା ପାଇଁ ହିସାବ କରାଯାଇଥିଲା । ଏହା ବ୍ୟତୀତ ଜମିଦାର ମାନଙ୍କର ନପର (କୋଷ) ଗୁଡ଼ିକରୁ ବାର୍ଷିକ କର ଆଦାୟ କରାଯାଇଥିଲା ଯାହାକି ବିଦ୍ୟାଳୟ, ଚିକିତ୍ସାଳୟ ଏବଂ ରାଷ୍ଟ୍ର ବାବଦରେ ନିଆଯାଇଥିଲା । ବାବଖାସି ସରକାରରେ ଏହି ନୁହେଁ କୌଣସି ଉଲ୍ଲେଖ ନାହିଁ । ଏହାର ବିପରୀତ, ଜମ୍ ନୁହେଁ କର ଏବଂ ସମସ୍ତ ଜମିଦାର ନିଜ ଜମିଦାରୀର ସମ୍ପୂର୍ଣ୍ଣ ଶାସକ ଥିଲେ ।

ପ୍ରୋଫୁନେସନର ଭାଗ I କେଉଁ ଶ୍ରେଣୀ ପାଇଁ ଉଦ୍ଦିଷ୍ଟ?

1. କେନ୍ଦ୍ର ଶ୍ରେଣୀ/ସଫେଇ କର୍ମଚାରୀ ଶ୍ରେଣୀ
2. ଉପାଧି ହୋଇଥିବା ଶ୍ରେଣୀ
3. ବ୍ୟବସାୟୀ ଶ୍ରେଣୀ
4. ଶିଳ୍ପ ଏବଂ କୃଷକ ଶ୍ରେଣୀ

Options :

485584146125. 1
485584146126. 2
485584146127. 3
485584146128. 4

Question Number : 148 Question Id : 48558436533 Question Type : MCQ Option Shuffling : No Is Question Mandatory : No Calculator : None Response Time : N.A Think Time : N.A Minimum Instruction Time : 0

Correct Marks : 5 Wrong Marks : 1

Question Key Details :

Key	Value
Comprehension	Comp2

Read the passage and answer the questions :

Section I - Regarding Zemindars. It is evident that the British Government in making zemindary settlement have imposed exorbitant *Jumas* (revenue demand) and have disgraced and ruined several Zemindars by putting up their estates for public auction for arrears of rent, in so much, in the institution of a suit by a common Ryot, a maid servant or a slave, the respectable Zemindars are summoned into court, arrested, put in goal and disgraced. In litigation regarding Zemindaries, the immense value of stamps, and other unnecessary expenses of the civil courts, ... are all calculated to impoverish the litigants. Besides this, the coffers of the Zemindars are annually taxed with the subscription for schools, hospitals, roads, etc. Such extortions will have no manner of existence in the Badshahi Government; but on the contrary the *Jumas* will be light, the dignity and honour of the Zemindars safe, and every Zemindar will have absolute rule in his own Zemindary...

Which of the difficulties and miseries of the zamindars have NOT been addressed in the Proclamation?

1. Absolute maximising of land tax.
2. Loss of social prestige.
3. Financial burden of the litigation.
4. Backwardness in communication and transportation.

Options :

485584146129. 1
485584146130. 2
485584146131. 3
485584146132. 4

Question Number : 148 Question Id : 48558436533 Question Type : MCQ Option Shuffling : No Is Question Mandatory : No Calculator : None Response Time : N.A Think Time : N.A Minimum Instruction Time : 0

Correct Marks : 5 Wrong Marks : 1

Question Key Details :

Key	Value
Comprehension	Comp2

ନିମ୍ନଲିଖିତ ଅନୁଲେଖନକୁ ପଢ଼ନ୍ତୁ ଏବଂ ଭଲର ଲେଖନ୍ତୁ:

ଏହା ଲକ୍ଷ ଯେ ବ୍ରିଟିଶ ସରକାର ଜମିଦାରୀ ସାଧା ବ୍ୟବସ୍ଥା କରିବାରେ ଅତ୍ୟଧିକ ମାତ୍ରାରେ କର ଆଦାୟ କରିଥିଲେ ଏବଂ ବହୁ ଜମିଦାରକୁ ଅପମାନ ଏବଂ ତାଙ୍କର ସମ୍ପତ୍ତି ନଷ୍ଟ କରିଦେଇଥିଲେ, ତାଙ୍କର ସମ୍ପତ୍ତିକୁ ନିରାମ କରାଯାଇଥିଲା ଯାହାଦ୍ୱାରା ସେମାନେ ବାକି ଭଡ଼ା ଆଦାୟ କରିପାରିଥିଲେ, ଏବଂ ସାଧାରଣ ଗଢ଼ାତକ ପ୍ରାୟ ମକଦ୍ଦମା ଚଳୁ କରି ସେମାନଙ୍କୁ କ୍ରିଡ଼ବାସ ଭାବେ ବ୍ୟବହାର କରାଯାଇଥିଲା । ସମ୍ଭାଜୀୟ ଜମିଦାର ମାନଙ୍କୁ ତିରାଗାଳୟକୁ ଡକା ଯାଇଥିଲା ଏବଂ ସହା ମଧ୍ୟ କରାଯାଇଥିଲା । ତେଣୁ ଜୋଡ଼ର ଅବରଜାରା ଖର୍ଚ୍ଚ ଏବଂ ଅତ୍ୟଧିକ ମାତ୍ରାରେ ଷ୍ଟାଫ ଜମିଦାର ମାନଙ୍କୁ ଅଧିକ ଦରିଦ୍ର କରିବା ପାଇଁ ହିସାବ କରାଯାଇଥିଲା । ଏହା ବ୍ୟତୀତ ଜମିଦାର ମାନଙ୍କର କଫର (କୋଷ୍ଠ) ଗୁଡ଼ିକରୁ ବାର୍ଷିକ କର ଆଦାୟ କରାଯାଇଥିଲା ଯାହାକି ବିଦ୍ୟାଳୟ, ଚିକିତ୍ସାଳୟ ଏବଂ ରାଷ୍ଟ୍ର ବାବଦରେ ନିଆଯାଇଥିଲା । ବାବଶାହି ସରକାରରେ ଏହି ନୁହେଁ କୌଣସି ଉଲ୍ଲେଖ ନାହିଁ । ଏହାର ବିପରୀତ, ଜମ୍ ନୂତନର କର ଏବଂ ସମସ୍ତ ଜମିଦାର ନିଜ ଜମିଦାରୀର ସମ୍ପୂର୍ଣ୍ଣ ଶାସକ ଥିଲେ ।

ଏହି ପ୍ରୋକ୍ଲମେସନରେ ଜମିଦାର ମାନଙ୍କର କେଉଁ ଯନ୍ତ୍ରଣା ଉଲ୍ଲେଖ କରାଯାଇନାହିଁ?

1. ଅତ୍ୟଧିକ ମାତ୍ରାରେ କର କରି
2. ସାମାଜିକ ସମ୍ମାନର କ୍ଷତି
3. ମକଦ୍ଦମା ଆର୍ଥିକ ବୋଧ
4. କଥାବାର୍ତ୍ତା ଏବଂ ଉପମାନମାନ

Options :

485584146129. 1
485584146130. 2
485584146131. 3
485584146132. 4

Question Number : 149 Question Id : 48558436534 Question Type : MCQ Option Shuffling : No Is Question Mandatory : No Calculator : None Response Time : N.A Think Time : N.A Minimum Instruction Time : 0

Correct Marks : 5 Wrong Marks : 1

Question Key Details :

Key	Value
Comprehension	Comp2

Read the passage and answer the questions :

Section I - Regarding Zemindars. It is evident that the British Government in making zemindary settlement have imposed exorbitant *Jumas* (revenue demand) and have disgraced and ruined several Zemindars by putting up their estates for public auction for arrears of rent, in so much, in the institution of a suit by a common Ryot, a maid servant or a slave, the respectable Zemindars are summoned into court, arrested, put in goal and disgraced. In litigation regarding Zemindaries, the immense value of stamps, and other unnecessary expenses of the civil courts... are all calculated to impoverish the litigants. Besides this, the coffers of the Zemindars are annually taxed with the subscription for schools, hospitals, roads, etc. Such extortions will have no manner of existence in the Badshahi Government; but on the contrary the *Jumas* will be light, the dignity and honour of the Zemindars safe, and every Zemindar will have absolute rule in his own Zemindary...

The alternative rule of 'Badshahi Government' proposed by the rebels in this proclamation refers to _____.

1. The rule of the king of England.
2. The royal nature of the company state.
3. The rule of India's traditional aristocratic class, such as of Bahadur Shah Zafar.
4. The rule established by the rebels based on the ordinary people of India.

Options :

- 485584146133. 1
- 485584146134. 2
- 485584146135. 3
- 485584146136. 4

Question Number : 149 Question Id : 48558436534 Question Type : MCQ Option Shuffling : No Is Question Mandatory : No Calculator : None Response Time : N.A Think Time : N.A Minimum Instruction Time : 0

Correct Marks : 5 Wrong Marks : 1

Question Key Details :

Key	Value
Comprehension	Comp2

ନିମ୍ନଲିଖିତ ଅନୁଛେଦଟିକୁ ପଢ଼ନ୍ତୁ ଏବଂ ଭଲ ଲେଖନ୍ତୁ:

ଏହା ଲକ୍ଷ ଯେ ବ୍ରିଟିଶ ସରକାର ଜମିଦାରୀ ସାଧା ବ୍ୟବସାୟ କରିବାରେ ଅତ୍ୟଧିକ ମାତ୍ରାରେ ଜର ଆଦାୟ କରିଥିଲେ ଏବଂ ବହୁ ଜମିଦାରକୁ ଅପମାନ ଏବଂ ତାଙ୍କର ସମ୍ପତ୍ତି ନଷ୍ଟ କରିଦେଇଥିଲେ, ତାଙ୍କର ସମ୍ପତ୍ତିକୁ ନିରାମ କରାଯାଇଥିଲା ଯାହାଦ୍ୱାରା ସେମାନେ ବାକି ରତ୍ତା ଆଦାୟ କରିପାରିଥିଲେ, ଏବଂ ସାଧାରଣ ଗରୀବଙ୍କ ସ୍ତ୍ରୀଙ୍କ ମବଦମ୍ମା ହୁଏ କିମ୍ବା ସେମାନଙ୍କୁ ବ୍ରିଟିଶଙ୍କ ଭାବେ ବ୍ୟବହାର କରାଯାଇଥିଲା । ସମ୍ମାନୀୟ ଜମିଦାର ମାନଙ୍କୁ ବିଚାରାଳୟକୁ ଡକାଇ ଯାଇଥିଲା ଏବଂ ସମା ମଧ୍ୟ କରାଯାଇଥିଲା । ତେଣୁ ଜୋଡ଼ର ଅବରଜାରା ଖର୍ଚ୍ଚ ଏବଂ ଅତ୍ୟଧିକ ମାତ୍ରାରେ ଖର୍ଚ୍ଚ ଜମିଦାର ମାନଙ୍କୁ ଅଧିକ ଦରିଦ୍ର କରିବା ପାଇଁ ହିସାବ କରାଯାଇଥିଲା । ଏହା ବ୍ୟତୀତ ଜମିଦାର ମାନଙ୍କର କଫର (କୋଷ୍ଠ) ଗୁଡ଼ିକରୁ ବାର୍ଷିକ କର ଆଦାୟ କରାଯାଇଥିଲା ଯାହାକି ବିଦ୍ୟାଳୟ, ଚିକିତ୍ସାଳୟ ଏବଂ ରାଷ୍ଟ୍ର ବାବଦରେ ନିଆଯାଇଥିଲା । ବାବଶାହି ସରକାରରେ ଏହି ନୁହେଁ କୌଣସି ଜଲେଖ ନାହିଁ ଏହାର ବିପରୀତ, ଜମ୍ ନୁହେଁ କର ଏବଂ ସମସ୍ତ ଜମିଦାର ନିଜ ଜମିଦାରୀର ସମ୍ପୂର୍ଣ୍ଣ ଶାସକ ଥିଲେ ।

ଏହି ପ୍ରୋବୁଲେସନରେ ଭଲେଖ କରାଯାଇଥିବା ନାବଶାହି ସରକାରଙ୍କର ଅନୁରୋଧିତ ନିୟମ:

1. ଜାଲିଖ ରାଜାଙ୍କର ଶାସନ
2. କମ୍ପାନୀର ରାଜକାର ଭଦ
3. ଗାଉଡ଼ର ପରମ୍ପରା ଚିୟମ ଯଥା ବାହାଦୁର ଶାହା କଫର
4. ବିଦ୍ରୋହୀ ମାନଙ୍କ ସ୍ତ୍ରୀ ନିର୍ମୂଳ ନିୟମ ଭାରତର ସର୍ବସାଧାରଣ ମାନଙ୍କ ପାଇଁ

Options :

485584146133. 1
485584146134. 2
485584146135. 3
485584146136. 4

Question Number : 150 Question Id : 48558436535 Question Type : MCQ Option Shuffling : No Is Question Mandatory : No Calculator : None Response Time : N.A Think Time : N.A Minimum Instruction Time : 0

Correct Marks : 5 Wrong Marks : 1

Question Key Details :

Key	Value
Comprehension	Comp2

Read the passage and answer the questions :

Section I - Regarding Zemindars. It is evident that the British Government in making zemindary settlement have imposed exorbitant *Jumas* (revenue demand) and have disgraced and ruined several Zemindars by putting up their estates for public auction for arrears of rent, in so much, in the institution of a suit by a common Ryot, a maid servant or a slave, the respectable Zemindars are summoned into court, arrested, put in goal and disgraced. In litigation regarding Zemindaries, the immense value of stamps, and other unnecessary expenses of the civil courts... are all calculated to impoverish the litigants. Besides this, the coffers of the Zemindars are annually taxed with the subscription for schools, hospitals, roads, etc. Such extortions will have no manner of existence in the Badshahi Government; but on the contrary the *Jumas* will be light, the dignity and honour of the Zemindars safe, and every Zemindar will have absolute rule in his own Zemindary...

Loss of zamindari estates and public auction of the same, as mentioned in the Proclamation, was caused by_____.

1. War of succession with the British.
2. Military expedition of the company.
3. New land reserve settlements of the company.
4. Lack of competence and co-ordination on part of the zamindars.

Options :

485584146137. 1
485584146138. 2
485584146139. 3
485584146140. 4

Question Number : 150 Question Id : 48558436535 Question Type : MCQ Option Shuffling : No Is Question Mandatory : No Calculator : None Response Time : N.A Think Time : N.A Minimum Instruction Time : 0

Correct Marks : 5 Wrong Marks : 1

Question Key Details :

Key	Value
Comprehension	Comp2

ନିମ୍ନଲିଖିତ ଅନୁଲେଖନକୁ ପଢ଼ନ୍ତୁ ଏବଂ ଭଲର ଲେଖନ୍ତୁ:

ଏହା ଘଣ୍ଟ ସେ ଦ୍ଵିତୀୟ ସରକାର ଜମିଦାରୀ ସ୍ଵାଧୀନ ବ୍ୟବସ୍ଥା କରିବାରେ ଅତ୍ୟଧିକ ମାତ୍ରାରେ ଜର ଆଦାୟ କରିଥିଲେ ଏବଂ ବହୁ ଜମିଦାରଙ୍କୁ ଅପମାନ ଏବଂ ତାଙ୍କର ସମ୍ପତ୍ତି ନଷ୍ଟ କରିଦେଇଥିଲେ, ତାଙ୍କର ସମ୍ପତ୍ତିକୁ ନିର୍ବାଣ କରାଯାଇଥିଲା ଯାହାଦ୍ଵାରା ସେମାନେ ବାକି ରତ୍ନ ଆଦାୟ କରିପାରିଥିଲେ, ଏବଂ ସାଧାରଣ ଗୟାତକ ପ୍ରାୟ ମକଦ୍ଦମା ହୁଏ କିମ୍ବା ସେମାନଙ୍କୁ କ୍ରିଡ଼ିଟସ ଲାଭେ ବ୍ୟବହାର କରାଯାଇଥିଲା। ସମ୍ଭାଗୀୟ ଜମିଦାର ମାନଙ୍କୁ ତିତାଗାଳରୁ ଦୂରୀକରଣ କରି ଦଳା ଦେଖାଯାଇଥିଲା। ତେଣୁ ଲୋକଙ୍କ ଅବରଜାରା ଖର୍ଚ୍ଚ ଏବଂ ଅତ୍ୟଧିକ ମାତ୍ରାରେ ଶାଫ୍ଟ ଜମିଦାର ମାନଙ୍କୁ ଅଧିକ ଦରିଦ୍ର କରିବା ପାଇଁ ହିସାବ କରାଯାଇଥିଲା। ଏହା ବ୍ୟତୀତ ଜମିଦାର ମାନଙ୍କର କଫର (କୋଷ୍ଠ) ଗୁଡ଼ିକରୁ ବାର୍ଷିକ କର ଆଦାୟ କରାଯାଇଥିଲା ଯାହାକି ବିଦ୍ୟାଳୟ, ଚିକିତ୍ସାଳୟ ଏବଂ ଗାଧା ବାବଦରେ ନିଆଯାଇଥିଲା। ବାବଶାହି ସରକାରରେ ଏହି ନୁହେଁ କୌଣସି ଜଳେଖ ନାହିଁ। ଏହାର ବିପରୀତ, ଜମ୍ ନୁହେଁ କର ଏବଂ ସମସ୍ତ ଜମିଦାର ନିଜ ଜମିଦାରୀର ସମ୍ପୂର୍ଣ୍ଣ ଶାସକ ଥିଲେ।

ପ୍ରୋକ୍ଲମେସନରେ ବର୍ଣ୍ଣାୟାଚିଥିବା ଜମିଦାର ମାନଙ୍କର ସମ୍ପତ୍ତିର ଛତ୍ର ଏବଂ ନିର୍ବାଣର କାରଣ:

1. ଦ୍ଵିତୀୟ ସହ ଖାର ଅଫ୍ ସକସେସନ୍
2. କମ୍ପାନୀର ମିଲିଟାରୀ ଏକ୍ସପେଡ଼ିସନ୍
3. କମ୍ପାନୀର ନୂଆ ଜମି ବା ସ୍ଵାଧୀନ ବ୍ୟବସ୍ଥା
4. ଜମିଦାରଙ୍କର ଅଜ୍ଞତା ଏବଂ ଯୋଚାଯୋଗ

Options :

485584146137. 1
485584146138. 2
485584146139. 3

Home Science

Group Number :	5
Group Id :	485584825
Group Maximum Duration :	45
Group Minimum Duration :	45
Show Attended Group? :	No
Edit Attended Group? :	No
Break time :	0
Group Marks :	200
Is this Group for Examiner? :	No
Examiner permission :	Cant View
Show Progress Bar? :	No

Home Science

Section Id :	485584949
Section Number :	1
Section type :	Online
Mandatory or Optional :	Mandatory
Number of Questions :	50
Number of Questions to be attempted :	40
Section Marks :	200
Enable Mark as Answered Mark for Review and Clear Response :	Yes
Maximum Instruction Time :	0
Sub-Section Number :	1
Sub-Section Id :	4855842699
Question Shuffling Allowed :	Yes
Is Section Default? :	null

Question Number : 151 Question Id : 48558436536 Question Type : MCQ Option Shuffling : No Is Question Mandatory : No Calculator : None Response Time : N.A Think Time : N.A Minimum Instruction Time : 0

Correct Marks : 5 Wrong Marks : 1

Question Key Details :

Key	Value
Comprehension	MCQ

The Persons with Disabilities Act was passed in which year?

1. 1995
2. 1996
3. 2000
4. 1998

Options :

485584146141. 1
485584146142. 2

485584146143. 3

485584146144. 4

Question Number : 151 Question Id : 48558436536 Question Type : MCQ Option Shuffling : No Is Question Mandatory : No Calculator : None Response Time : N.A Think Time : N.A Minimum Instruction Time : 0

Correct Marks : 5 Wrong Marks : 1

Question Key Details :

Key	Value
Comprehension	MCQ

କୋବିଡ଼ ଅକ୍ଷୟତା ଧାରା କେଉଁ ବର୍ଷ ପାଇଁ ହୋଇଥିଲା?

1. 1995

2. 1996

3. 2000

4. 1998

Options :

485584146141. 1

485584146142. 2

485584146143. 3

485584146144. 4

Question Number : 152 Question Id : 48558436537 Question Type : MCQ Option Shuffling : No Is Question Mandatory : No Calculator : None Response Time : N.A Think Time : N.A Minimum Instruction Time : 0

Correct Marks : 5 Wrong Marks : 1

Question Key Details :

Key	Value
Comprehension	MCQ

The causes of disability in children can be grouped into three categories which are:

- A. Factors that impinge on the child during development
- B. Factors due to school education
- C. Factors that affect before birth, both genetic and non-genetic
- D. Factors that affect the child at birth or soon after birth

Choose the correct answer from the options given below:

1. A, C and D only

2. A, B and C only

3. B, C and D only

4. A, B and D only

Options :

485584146145. 1

485584146146. 2

485584146147. 3

485584146148. 4

Question Number : 152 Question Id : 48558436537 Question Type : MCQ Option Shuffling : No Is Question Mandatory : No Calculator : None Response Time : N.A Think Time : N.A Minimum Instruction Time : 0

Correct Marks : 5 Wrong Marks : 1

Question Key Details :

Key	Value
Comprehension	MCQ

ଶିଶୁମାନଙ୍କର ଶାରୀରିକ ଅକ୍ଷୟ କାରଣ ତିନୋଟି ବିଭାଗରେ ଜାଲିକାହୁଡ଼ି କରାଯାଏ:

- A. କାରଣ ଯାହା ଶିଶୁର ବିକାଶ ସମୟରେ
- B. ବିକାଶର ଶିକ୍ଷାର କାରଣ
- C. କାରଣ ଯାହା କରୁ ପୂର୍ବରୁ ପ୍ରଭାବିତ ହୁଏ, ତତ୍ପରେ ବ୍ୟକ୍ତିତ୍ୱ ଓ ଅବଶ୍ୟକତା
- D. କାରଣ ଯାହା ଶିଶୁର କରୁ ସମୟରେ ହୋଇଥାଏ କିମ୍ବା କରୁ ପରେ ହୋଇଥାଏ

ନିମ୍ନଲିଖିତ ବିକଳ୍ପ ମଧ୍ୟରୁ ସଠିକ୍ ଉତ୍ତରଟି ଚାହୁଣନ୍ତୁ:

- 1. କେବଳ A, C ଏବଂ D
- 2. କେବଳ A, B ଏବଂ C
- 3. କେବଳ B, C ଏବଂ D
- 4. କେବଳ A, B ଏବଂ D

Options :

- 485584146145. 1
- 485584146146. 2
- 485584146147. 3
- 485584146148. 4

Question Number : 153 Question Id : 48558436538 Question Type : MCQ Option Shuffling : No Is Question Mandatory : No Calculator : None Response Time : N.A Think Time : N.A Minimum Instruction Time : 0

Correct Marks : 5 Wrong Marks : 1

Question Key Details :

Key	Value
Comprehension	MCQ

_____ is the basic unit of society which looks after its members.

- 1. School
- 2. Family
- 3. Neighbour
- 4. Friends

Options :

- 485584146149. 1

485584146150. 2
485584146151. 3
485584146152. 4

Question Number : 153 Question Id : 48558436538 Question Type : MCQ Option Shuffling : No Is Question Mandatory : No Calculator : None Response Time : N.A Think Time : N.A Minimum Instruction Time : 0

Correct Marks : 5 Wrong Marks : 1

Question Key Details :

Key	Value
Comprehension	MCQ

_____ ଶେଷର ସମାଜର ଶୈଳିକ ସୂଚକ ଯାହା ଏହାର ସଦସ୍ୟ ମାନଙ୍କୁ ବେଶାଶୁଣା କରେ।

1. School
2. Family
3. Neighbours
4. Friends

Options :

485584146149. 1
485584146150. 2
485584146151. 3
485584146152. 4

Question Number : 154 Question Id : 48558436539 Question Type : MCQ Option Shuffling : No Is Question Mandatory : No Calculator : None Response Time : N.A Think Time : N.A Minimum Instruction Time : 0

Correct Marks : 5 Wrong Marks : 1

Question Key Details :

Key	Value
Comprehension	MCQ

In India, a senior citizen is a person belonging to which of the following age group?

1. 65 years and above
2. 60 years and above
3. 70 years and above
4. 80 years and above

Options :

485584146153. 1
485584146154. 2
485584146155. 3
485584146156. 4

Question Number : 154 Question Id : 48558436539 Question Type : MCQ Option Shuffling : No Is Question Mandatory : No Calculator : None Response Time : N.A Think Time : N.A Minimum Instruction Time : 0

Correct Marks : 5 Wrong Marks : 1

Question Key Details :

Key	Value
Comprehension	MCQ

ଭାରତରେ ବରିଷ୍ଠ ନାଗରିକ ମାନେ ବିମୁକ୍ତିଦିନ କେଉଁ ବୟସ ସାମାରେ ଅବସ୍ଥାପିତ ହୁଅନ୍ତି।

1. 65 years and above
2. 60 years and above
3. 70 years and above
4. 80 years and above

Options :

485584146153. 1
485584146154. 2
485584146155. 3
485584146156. 4

Question Number : 155 Question Id : 48558436540 Question Type : MCQ Option Shuffling : No Is Question Mandatory : No Calculator : None Response Time : N.A Think Time : N.A Minimum Instruction Time : 0

Correct Marks : 5 Wrong Marks : 1

Question Key Details :

Key	Value
Comprehension	MCQ

In which year, Ministry of Youth Affairs and Sports adopted the National Youth Policy?

1. 2005
2. 2003
3. 2004
4. 2010

Options :

485584146157. 1
485584146158. 2
485584146159. 3
485584146160. 4

Question Number : 155 Question Id : 48558436540 Question Type : MCQ Option Shuffling : No Is Question Mandatory : No Calculator : None Response Time : N.A Think Time : N.A Minimum Instruction Time : 0

Correct Marks : 5 Wrong Marks : 1

Question Key Details :

Key	Value
Comprehension	MCQ

କେଉଁ ବର୍ଷ "ନିନିଷ୍ଠି ଅଫ୍ ଯୁଥ ଏଫାୟାର୍ସ ଓ ଛୋଟ" ଜାତୀୟ ଯୁବ ନୀତିକୁ ସାକାର କରିଥିଲା।

1. 2005
2. 2003
3. 2004
4. 2010

Options :

- 485584146157. 1
- 485584146158. 2
- 485584146159. 3
- 485584146160. 4

Question Number : 156 Question Id : 48558436541 Question Type : MCQ Option Shuffling : No Is Question Mandatory : No Calculator : None Response Time : N.A Think Time : N.A Minimum Instruction Time : 0

Correct Marks : 5 Wrong Marks : 1

Question Key Details :

Key	Value
Comprehension	MCQ

Name the psychologist who outlined the great need that children have for a concerned, caring and knowledgeable adult.

1. Piaget
2. Freud
3. Vygotsky
4. Bruner

Options :

- 485584146161. 1
- 485584146162. 2
- 485584146163. 3
- 485584146164. 4

Question Number : 156 Question Id : 48558436541 Question Type : MCQ Option Shuffling : No Is Question Mandatory : No Calculator : None Response Time : N.A Think Time : N.A Minimum Instruction Time : 0

Correct Marks : 5 Wrong Marks : 1

Question Key Details :

Key	Value
Comprehension	MCQ

କେହି ନିମ୍ନୋକ୍ତ ବିଜ୍ଞାନ ନାମ କେଉଁ ଯିଏ ସମ୍ବେଦନଶୀଳ, ଯତ୍ନବାନ ଏବଂ ଜ୍ଞାନୀ ବୟସକ ପାଇଁ ଶିକ୍ଷାନୁଷ୍ଠାନର ଅଧିକ ଆବଶ୍ୟକତାକୁ ବିଶେଷ ଦୃଷ୍ଟି ଦେଇଛନ୍ତି। ତାଙ୍କ ନାମ କଣ?

1. Piaget
2. Freud
3. Vygotsky
4. Bruner

Options :

485584146161. 1
485584146162. 2
485584146163. 3
485584146164. 4

Question Number : 157 Question Id : 48558436542 Question Type : MCQ Option Shuffling : No Is Question Mandatory : No Calculator : None Response Time : N.A Think Time : N.A Minimum Instruction Time : 0

Correct Marks : 5 Wrong Marks : 1

Question Key Details :

Key	Value
Comprehension	MCQ

Identify the given standardisation mark.



1. ISI
2. FPO
3. AGMARK
4. Hallmark

Options :

485584146165. 1
485584146166. 2
485584146167. 3
485584146168. 4

Question Number : 157 Question Id : 48558436542 Question Type : MCQ Option Shuffling : No Is Question Mandatory : No Calculator : None Response Time : N.A Think Time : N.A Minimum Instruction Time : 0

Correct Marks : 5 Wrong Marks : 1

Question Key Details :

Key	Value
Comprehension	MCQ

ନିମ୍ନରେ ବିଜ୍ଞାପିତ ଥିବା ଗାମାକ କୁ ଚିହ୍ନିତ କର।



1. ISI
2. FPO
3. AGMARK
4. Hallmark

Options :

- 485584146165. 1
- 485584146166. 2
- 485584146167. 3
- 485584146168. 4

Question Number : 158 Question Id : 48558436543 Question Type : MCQ Option Shuffling : No Is Question Mandatory : No Calculator : None Response Time : N.A Think Time : N.A Minimum Instruction Time : 0

Correct Marks : 5 Wrong Marks : 1

Question Key Details :

Key	Value
Comprehension	MCQ

A process through which buyer makes decisions about purchasing is known as _____.

1. Consumer behaviour
2. Consumer right
3. Consumer footfall
4. Consumer expectation

Options :

- 485584146169. 1

485584146170. 2
485584146171. 3
485584146172. 4

Question Number : 158 Question Id : 48558436543 Question Type : MCQ Option Shuffling : No Is Question Mandatory : No Calculator : None Response Time : N.A Think Time : N.A Minimum Instruction Time : 0

Correct Marks : 5 Wrong Marks : 1

Question Key Details :

Key	Value
Comprehension	MCQ

ଯେଉଁଥିରେ ବ୍ରୋଡ଼ା କିଣିବାର ନିଷ୍ପତ୍ତି ନେଇଥାଏ ସେହି ପ୍ରକ୍ରିୟାକୁ କଣ କୁହାଯାଏ?

1. ଗ୍ରାହକ-ବ୍ୟବସ୍ଥାର
2. ଗ୍ରାହକ ଅଧିକାର
3. ଗ୍ରାହକ ଉପସ୍ଥିତ
4. ଗ୍ରାହକ ଚାହିଦା

Options :

485584146169. 1
485584146170. 2
485584146171. 3
485584146172. 4

Question Number : 159 Question Id : 48558436544 Question Type : MCQ Option Shuffling : No Is Question Mandatory : No Calculator : None Response Time : N.A Think Time : N.A Minimum Instruction Time : 0

Correct Marks : 5 Wrong Marks : 1

Question Key Details :

Key	Value
Comprehension	MCQ

Which of the following is a tool to empower and equip consumers to protect themselves from adverse market forces ?

1. Consumer education
2. Consumer problems
3. Consumer behaviour
4. Consumer responsibility

Options :

485584146173. 1
485584146174. 2
485584146175. 3
485584146176. 4

Question Number : 159 Question Id : 48558436544 Question Type : MCQ Option Shuffling : No Is Question Mandatory : No Calculator : None Response Time : N.A Think Time : N.A Minimum Instruction Time : 0

Correct Marks : 5 Wrong Marks : 1

Question Key Details :

Key	Value
Comprehension	MCQ

ନିମ୍ନଲିଖିତ ମଧ୍ୟରୁ କେଉଁ କୌଣସି ଗ୍ରାହକକୁ ଉପହାସକାଳଣ କରେ ଯେଉଁଥିରେ ଗ୍ରାହକ ନିଜକୁ ସଜାରର ନିର୍ଦ୍ଧାରିତ ସର ଠାରୁ ଦୁର୍ଲ୍ଲଭ ସର ମାଧ୍ୟମରେ ସୂଚିତ କରିଥାଏ।

1. ଗ୍ରାହକ ଶିକ୍ଷା
2. ଗ୍ରାହକ ସମୟ
3. ଗ୍ରାହକ ବ୍ୟବହାର
4. ଗ୍ରାହକ ସାକ୍ଷିତ୍ୱ

Options :

- 485584146173. 1
- 485584146174. 2
- 485584146175. 3
- 485584146176. 4

Question Number : 160 Question Id : 48558436545 Question Type : MCQ Option Shuffling : No Is Question Mandatory : No Calculator : None Response Time : N.A Think Time : N.A Minimum Instruction Time : 0

Correct Marks : 5 Wrong Marks : 1

Question Key Details :

Key	Value
Comprehension	MCQ

What is the other name for short lived fashion?

1. Fad
2. Classic
3. Style
4. Design

Options :

- 485584146177. 1
- 485584146178. 2
- 485584146179. 3
- 485584146180. 4

Question Number : 160 Question Id : 48558436545 Question Type : MCQ Option Shuffling : No Is Question Mandatory : No Calculator : None Response Time : N.A Think Time : N.A Minimum Instruction Time : 0

Correct Marks : 5 Wrong Marks : 1

Question Key Details :

Key	Value
-----	-------

Comprehension	MCQ
---------------	-----

ଅନ୍ତରାଳ ସମ୍ପୂର୍ଣ୍ଣ ଭାବରେ ଉପଯୁକ୍ତ ଯେଉଁସବୁ ଅନ୍ତରାଳ ନାମ କରନ୍ତୁ?

1. Fad
2. Classic
3. Style
4. Design

Options :

485584146177. 1
485584146178. 2
485584146179. 3
485584146180. 4

Question Number : 161 Question Id : 48558436546 Question Type : MCQ Option Shuffling : No Is Question Mandatory : No Calculator : None Response Time : N.A Think Time : N.A Minimum Instruction Time : 0

Correct Marks : 5 Wrong Marks : 1

Question Key Details :

Key	Value
Comprehension	MCQ

You have to purchase a dress for your sister who is tall and slim. Inclusion of which of the following will be appropriate for her?

1. Vertical lines
2. Horizontal lines
3. Dark colours
4. High waist bodice

Options :

485584146181. 1
485584146182. 2
485584146183. 3
485584146184. 4

Question Number : 161 Question Id : 48558436546 Question Type : MCQ Option Shuffling : No Is Question Mandatory : No Calculator : None Response Time : N.A Think Time : N.A Minimum Instruction Time : 0

Correct Marks : 5 Wrong Marks : 1

Question Key Details :

Key	Value
Comprehension	MCQ

ତୁମେ ତୁମ ଭଉଣୀ ପାଇଁ ଏକ ଚତୁର୍ଥ ଚରଣର ବସ୍ତୁ ଯିଏ ଜାଣା ଓ ପଢ଼ିଲା ଅଛି। ବିପ୍ଳବଗତ ଉପାଦାନ ମାନକ ମଧ୍ୟରୁ କେଉଁଟି ତା ପାଇଁ ଯୁକ୍ତିଯୁକ୍ତ?

1. Vertical lines
2. Horizontal lines
3. Dark colours
4. High waist bodice

Options :

- 485584146181. 1
- 485584146182. 2
- 485584146183. 3
- 485584146184. 4

Question Number : 162 Question Id : 48558436547 Question Type : MCQ Option Shuffling : No Is Question Mandatory : No Calculator : None Response Time : N.A Think Time : N.A Minimum Instruction Time : 0

Correct Marks : 5 Wrong Marks : 1

Question Key Details :

Key	Value
Comprehension	MCQ

_____ ability requires a thorough knowledge of past future trends and current future trends.

1. Analytical
2. Forecasting
3. Communication
4. Technical

Options :

- 485584146185. 1
- 485584146186. 2
- 485584146187. 3
- 485584146188. 4

Question Number : 162 Question Id : 48558436547 Question Type : MCQ Option Shuffling : No Is Question Mandatory : No Calculator : None Response Time : N.A Think Time : N.A Minimum Instruction Time : 0

Correct Marks : 5 Wrong Marks : 1

Question Key Details :

Key	Value
Comprehension	MCQ

ଅତୀତ, ବର୍ତ୍ତମାନ ଓ ଭବିଷ୍ୟତ ର ତ୍ରେୟ ର ବିସ୍ତୃତ ଜ୍ଞାନ ପାଇଁ _____ ଦକ୍ଷତା ଆବଶ୍ୟକ ହୋଇଥାଏ।।

1. ବ୍ୟାଞ୍ଜ୍ୟ
2. ଅଭିମାନ
3. ଯୋଗାଯୋଗ
4. ବୈଷୟିକ

Options :

485584146185. 1
485584146186. 2
485584146187. 3
485584146188. 4

Question Number : 163 Question Id : 48558436548 Question Type : MCQ Option Shuffling : No Is Question Mandatory : No Calculator : None Response Time : N.A Think Time : N.A Minimum Instruction Time : 0

Correct Marks : 5 Wrong Marks : 1

Question Key Details :

Key	Value
Comprehension	MCQ

_____ is the important phase in wash cycle. If it is not done properly, clothes may look grey, dull with harsh texture.

1. Water extraction
2. Rinsing
3. Drying
4. Pressing

Options :

485584146189. 1
485584146190. 2
485584146191. 3
485584146192. 4

Question Number : 163 Question Id : 48558436548 Question Type : MCQ Option Shuffling : No Is Question Mandatory : No Calculator : None Response Time : N.A Think Time : N.A Minimum Instruction Time : 0

Correct Marks : 5 Wrong Marks : 1

Question Key Details :

Key	Value
Comprehension	MCQ

ଧୋଇବା ଚକ୍ରରେ _____ ହେଉଛି ଏକ ପୁରୁଷପୂର୍ଣ୍ଣ ପର୍ଯ୍ୟାୟ। ଯଦି ଏହା ଭଲ ଭାବରେ ହେବ ତାହା କପଡ଼ା ମଳିଚିଆ, ମାଲ ଓ କପାରିଆ ଦେଖାଯିବାର ସମ୍ଭାବନା ଥାଏ।

1. ଚନ୍ଦ୍ର ନିଷ୍କାସନ
2. ଧୋଇବା
3. ଶୁଷ୍କ କରିବା
4. ବସେଇବା

Options :

485584146189. 1
485584146190. 2
485584146191. 3
485584146192. 4

Question Number : 164 Question Id : 48558436549 Question Type : MCQ Option Shuffling : No Is Question Mandatory : No Calculator : None Response Time : N.A Think Time : N.A Minimum Instruction Time : 0

Correct Marks : 5 Wrong Marks : 1

Question Key Details :

Key	Value
Comprehension	MCQ

Which of the following colour scheme refers to a colour combination using two or three hues that lie side by side on the colour wheel?

1. Achromatic harmony
2. Accented neutral
3. Analogous harmony
4. Complementary harmony

Options :

485584146193. 1
485584146194. 2
485584146195. 3
485584146196. 4

Question Number : 164 Question Id : 48558436549 Question Type : MCQ Option Shuffling : No Is Question Mandatory : No Calculator : None Response Time : N.A Think Time : N.A Minimum Instruction Time : 0

Correct Marks : 5 Wrong Marks : 1

Question Key Details :

Key	Value
Comprehension	MCQ

ନିମ୍ନଲିଖିତ ରଙ୍ଗ ବିନ୍ଦୁ ଉପରେ ଗୋଟିଏ ରଙ୍ଗ ନିଜର ଯେଉଁଠାରେ ସୁନ୍ଦର କିମ୍ବା ତିନି ରଙ୍ଗ ନିର୍ମିତାଏ ଯାହା ରଙ୍ଗ ଚକ୍ରର ପାରିପାଶ୍ଵିକ ଭାବରେ ଥାଏ।

1. Achromatic harmony
2. Accented neutral
3. Analogous harmony
4. Complementary harmony

Options :

485584146193. 1
485584146194. 2
485584146195. 3
485584146196. 4

Question Number : 165 Question Id : 48558436550 Question Type : MCQ Option Shuffling : No Is Question Mandatory : No Calculator : None Response Time : N.A Think Time : N.A Minimum Instruction Time : 0

Correct Marks : 5 Wrong Marks : 1

Question Key Details :

Key	Value
Comprehension	MCQ

The term "Development Communication" was first coined by Quebral in which year?

1. 1969
2. 1970
3. 1972
4. 1974

Options :

485584146197. 1
485584146198. 2
485584146199. 3
485584146200. 4

Question Number : 165 Question Id : 48558436550 Question Type : MCQ Option Shuffling : No Is Question Mandatory : No Calculator : None Response Time : N.A Think Time : N.A Minimum Instruction Time : 0

Correct Marks : 5 Wrong Marks : 1

Question Key Details :

Key	Value
Comprehension	MCQ

କେଉଁ ବର୍ଷ "ବିକାଶ ଯୋଜାଯୋଜା" ଶବ୍ଦ କେନ୍ଦ୍ରୀୟ କି ଦ୍ଵାରା ଗଠିତ ହୋଇଥିଲା।

1. 1969
2. 1970
3. 1972
4. 1974

Options :

485584146197. 1
485584146198. 2
485584146199. 3
485584146200. 4

Question Number : 166 Question Id : 48558436551 Question Type : MCQ Option Shuffling : No Is Question Mandatory : No Calculator : None Response Time : N.A Think Time : N.A Minimum Instruction Time : 0

Correct Marks : 5 Wrong Marks : 1

Question Key Details :

Key	Value
Comprehension	MCQ

To create focused attention on a small village in Delhi, the Project village Chattera was started in 1969. Which newspaper was involved in this project?

1. The Times of India
2. The Hindustan Times
3. Navbharat times
4. The Hindu

Options :

485584146201. 1
485584146202. 2
485584146203. 3
485584146204. 4

Question Number : 166 Question Id : 48558436551 Question Type : MCQ Option Shuffling : No Is Question Mandatory : No Calculator : None Response Time : N.A Think Time : N.A Minimum Instruction Time : 0

Correct Marks : 5 Wrong Marks : 1

Question Key Details :

Key	Value
Comprehension	MCQ

ବିକାଶ ଛୋଟ ଏକ ଗ୍ରାମକୁ ଲୋକଲୋଚନକୁ ଆଣିବା ପାଇଁ 1969 ମସିହାରେ ପ୍ରକଟ ଗ୍ରାମ ଛରେବା ଆରମ୍ଭ ହୋଇଥିଲା। ଏହି ପ୍ରକଟ ପାଇଁ କେଉଁ ସମ୍ବାଦପତ୍ର ଅନ୍ତର୍ଭୁକ୍ତ ଥିଲା?

1. The Times of India
2. The Hindustan Times
3. Navbharat times
4. The Hindu

Options :

- 485584146201. 1
- 485584146202. 2
- 485584146203. 3
- 485584146204. 4

Question Number : 167 Question Id : 48558436552 Question Type : MCQ Option Shuffling : No Is Question Mandatory : No Calculator : None Response Time : N.A Think Time : N.A Minimum Instruction Time : 0

Correct Marks : 5 Wrong Marks : 1

Question Key Details :

Key	Value
Comprehension	MCQ

In which of the following disease condition, low fibre diet is recommended?

1. Diarrhoea
2. Constipation
3. Diabetes
4. Heart disease

Options :

- 485584146205. 1
- 485584146206. 2
- 485584146207. 3
- 485584146208. 4

Question Number : 167 Question Id : 48558436552 Question Type : MCQ Option Shuffling : No Is Question Mandatory : No Calculator : None Response Time : N.A Think Time : N.A Minimum Instruction Time : 0

Correct Marks : 5 Wrong Marks : 1

Question Key Details :

Key	Value
Comprehension	MCQ

ନିମ୍ନଲିଖିତ କେଉଁ ରୋଗ ପାଇଁ ଖାଦ୍ୟରେ ସ୍ୱଚ୍ଛ ଆଚାରକୁ ନୁ ପରାମର୍ଶ କରାଯାଏ।

1. Diarrhoea
2. Constipation
3. Diabetes
4. Heart disease

Options :

485584146205. 1
485584146206. 2
485584146207. 3
485584146208. 4

Question Number : 168 Question Id : 48558436553 Question Type : MCQ Option Shuffling : No Is Question Mandatory : No Calculator : None Response Time : N.A Think Time : N.A Minimum Instruction Time : 0

Correct Marks : 5 Wrong Marks : 1

Question Key Details :

Key	Value
Comprehension	MCQ

Which of the following is a welfare catering service ?

1. Holiday camps
2. Langar
3. Clubs
4. Flight kitchens

Options :

485584146209. 1
485584146210. 2
485584146211. 3
485584146212. 4

Question Number : 168 Question Id : 48558436553 Question Type : MCQ Option Shuffling : No Is Question Mandatory : No Calculator : None Response Time : N.A Think Time : N.A Minimum Instruction Time : 0

Correct Marks : 5 Wrong Marks : 1

Question Key Details :

Key	Value
Comprehension	MCQ

ନିମ୍ନଲିଖିତ ମଧ୍ୟରୁ କେଉଁଟି ଗୁଣ ଭୋକ୍ତାଙ୍କ ସେବା ଅଟେ?

1. Holiday camps
2. Langar
3. Clubs
4. Flight kitchens

Options :

485584146209. 1
485584146210. 2
485584146211. 3
485584146212. 4

Question Number : 169 Question Id : 48558436554 Question Type : MCQ Option Shuffling : No Is Question Mandatory : No Calculator : None Response Time : N.A Think Time : N.A Minimum Instruction Time : 0

Correct Marks : 5 Wrong Marks : 1

Question Key Details :

Key	Value
Comprehension	MCQ

Which of these is NOT a feature of GMP (Good Manufacturing Practice)?

1. Minimise false labelling
2. Consumer education
3. Eliminate contamination
4. Mislead consumer

Options :

485584146213. 1
485584146214. 2
485584146215. 3
485584146216. 4

Question Number : 169 Question Id : 48558436554 Question Type : MCQ Option Shuffling : No Is Question Mandatory : No Calculator : None Response Time : N.A Think Time : N.A Minimum Instruction Time : 0

Correct Marks : 5 Wrong Marks : 1

Question Key Details :

Key	Value
Comprehension	MCQ

ନିମ୍ନଲିଖିତ ମଧ୍ୟରୁ କେଉଁଟି GMP ର ଉଦ୍ଦେଶ୍ୟ ନୁହେଁ (Good Manufacturing Practice)?

1. Minimise false labelling
2. Consumer education
3. Eliminate contamination
4. Mislead consumer

Options :

485584146213. 1
485584146214. 2
485584146215. 3
485584146216. 4

Question Number : 170 Question Id : 48558436555 Question Type : MCQ Option Shuffling : No Is Question Mandatory : No Calculator : None Response Time : N.A Think Time : N.A Minimum Instruction Time : 0

Correct Marks : 5 Wrong Marks : 1

Question Key Details :

Key	Value
Comprehension	MCQ

In the context of food standards regulations, which of the following is an international reference for quality management of an organisation?

1. ISO 6000
2. ISO 7000
3. ISO 8000
4. ISO 9000

Options :

485584146217. 1
485584146218. 2
485584146219. 3
485584146220. 4

Question Number : 170 Question Id : 48558436555 Question Type : MCQ Option Shuffling : No Is Question Mandatory : No Calculator : None Response Time : N.A Think Time : N.A Minimum Instruction Time : 0

Correct Marks : 5 Wrong Marks : 1

Question Key Details :

Key	Value
Comprehension	MCQ

ଆଦ୍ୟମାନ ପରିଚାଳନାର ବିଭିନ୍ନ କ୍ରମ କେଉଁ ନିମ୍ନଲିଖିତ ମଧ୍ୟରୁ କେଉଁଟି ଗୁଣମାନ ପରିଚାଳନା ପାଇଁ ଏକ ବିଶ୍ୱସ୍ତରୀୟ ସଂଜ୍ଞା?

1. ISO 6000
2. ISO 7000
3. ISO 8000
4. ISO 9000

Options :

485584146217. 1
485584146218. 2
485584146219. 3
485584146220. 4

Question Number : 171 Question Id : 48558436556 Question Type : MCQ Option Shuffling : No Is Question Mandatory : No Calculator : None Response Time : N.A Think Time : N.A Minimum Instruction Time : 0

Correct Marks : 5 Wrong Marks : 1

Question Key Details :

Key	Value
Comprehension	MCQ

In the context of food safety, intentional or accidental addition of impure ingredients that alters the properties and diminishes the quality of food is known as _____.

1. Contamination
2. Toxicity
3. Adulteration
4. Hazard

Options :

485584146221. 1
485584146222. 2
485584146223. 3
485584146224. 4

Question Number : 171 Question Id : 48558436556 Question Type : MCQ Option Shuffling : No Is Question Mandatory : No Calculator : None Response Time : N.A Think Time : N.A Minimum Instruction Time : 0

Correct Marks : 5 Wrong Marks : 1

Question Key Details :

Key	Value
Comprehension	MCQ

ଶାନ୍ତ ସୁରକ୍ଷାକୁ ନେଇ କାଣିଶୁଣି କିମ୍ବା ଅକାଶତରେ ଅଶୁଦ୍ଧ ଦ୍ରବ୍ୟ ଯାହା ଶାନ୍ତର ସୁରକ୍ଷାକୁ କମ୍ କରିଥାଏ, ତାକୁ _____ କୁହାଯାଏ।

1. ଦୂଷିତ କରିବା
2. ବିରାଗ
3. ଅପମିଶ୍ରଣ
4. ବିପଦ

Options :

- 485584146221. 1
- 485584146222. 2
- 485584146223. 3
- 485584146224. 4

Question Number : 172 Question Id : 48558436557 Question Type : MCQ Option Shuffling : No Is Question Mandatory : No Calculator : None Response Time : N.A Think Time : N.A Minimum Instruction Time : 0

Correct Marks : 5 Wrong Marks : 1

Question Key Details :

Key	Value
Comprehension	MCQ

Fortification as an intervention is used under which of the following strategies to combat public nutrition problems ?

1. Nutrient based strategy
2. Medicinal strategy
3. Diet based strategy
4. Supplement based strategy

Options :

- 485584146225. 1
- 485584146226. 2
- 485584146227. 3
- 485584146228. 4

Question Number : 172 Question Id : 48558436557 Question Type : MCQ Option Shuffling : No Is Question Mandatory : No Calculator : None Response Time : N.A Think Time : N.A Minimum Instruction Time : 0

Correct Marks : 5 Wrong Marks : 1

Question Key Details :

Key	Value
Comprehension	MCQ

ପୁଷ୍ଟିକରଣ ପାଇଁ ସାଧାରଣତଃ ବ୍ୟବହୃତ ଖାଦ୍ୟ ଯୋଗ୍ୟ ଅସୁବିଧା

1. Nutrient based strategy
2. Medicinal strategy
3. Diet based strategy
4. Supplement based strategy

Options :

485584146225. 1
485584146226. 2
485584146227. 3
485584146228. 4

Question Number : 173 Question Id : 48558436558 Question Type : MCQ Option Shuffling : No Is Question Mandatory : No Calculator : None Response Time : N.A Think Time : N.A Minimum Instruction Time : 0

Correct Marks : 5 Wrong Marks : 1

Question Key Details :

Key	Value
Comprehension	MCQ

Which of the following is referred to as "Hidden Hunger" in the context of nutritional problems?

1. Micronutrient deficiencies
2. Malnutrition
3. Stunting
4. Wasting

Options :

485584146229. 1
485584146230. 2
485584146231. 3
485584146232. 4

Question Number : 173 Question Id : 48558436558 Question Type : MCQ Option Shuffling : No Is Question Mandatory : No Calculator : None Response Time : N.A Think Time : N.A Minimum Instruction Time : 0

Correct Marks : 5 Wrong Marks : 1

Question Key Details :

Key	Value
Comprehension	MCQ

ନିମ୍ନଲିଖିତ ମଧ୍ୟରୁ କେଉଁଟି ଲୁଚି ରହିଥିବା ଯୁଧା ଯାହା ପୋଷଣ ସମସ୍ତଙ୍କୁ ନେଇ ହୋଇଥାଏ।

1. ଶୁଦ୍ର ପୋଷଣ ସମସ୍ତ

2. ଅପୋଷଣତା

3. ନିର୍ବାହ ରହିବା

4. ନଷ୍ଟ କରିବା

Options :

485584146229. 1

485584146230. 2

485584146231. 3

485584146232. 4

Question Number : 174 Question Id : 48558436559 Question Type : MCQ Option Shuffling : No Is Question Mandatory : No Calculator : None Response Time : N.A Think Time : N.A Minimum Instruction Time : 0

Correct Marks : 5 Wrong Marks : 1

Question Key Details :

Key	Value
Comprehension	MCQ

Which of the following government body framed the National Nutrition Policy (NNP) of India in the year 1993?

1. Department of Women and Child Development

2. Ministry of Health and Family Welfare

3. Department of Science and Technology

4. Ministry of Consumer Affairs

Options :

485584146233. 1

485584146234. 2

485584146235. 3

485584146236. 4

Question Number : 174 Question Id : 48558436559 Question Type : MCQ Option Shuffling : No Is Question Mandatory : No Calculator : None Response Time : N.A Think Time : N.A Minimum Instruction Time : 0

Correct Marks : 5 Wrong Marks : 1

Question Key Details :

Key	Value
Comprehension	MCQ

ନିମ୍ନଲିଖିତ କେଉଁ ସରକାରୀ ସଂସ୍ଥା ଭାରତୀୟ ଜାତୀୟ ପୋଷଣ ନୀତି (NNP) 1993 ଜେ ଗଠନ କରିଛି?

1. ମହିଳା ଓ ଶିଶୁ ବିକାଶ ବିଭାଗ
2. ସ୍ୱାସ୍ଥ୍ୟ ଓ ପରିବାର କଲ୍ୟାଣ ମନ୍ତ୍ରାଳୟ
3. ବିଜ୍ଞାନ ଓ ଟେକ୍ନୋଲୋଜି ବିଭାଗ
4. ଶାନ୍ତି କଲ୍ୟାଣ ମନ୍ତ୍ରାଳୟ

Options :

485584146233. 1
485584146234. 2
485584146235. 3
485584146236. 4

Question Number : 175 Question Id : 48558436560 Question Type : MCQ Option Shuffling : No Is Question Mandatory : No Calculator : None Response Time : N.A Think Time : N.A Minimum Instruction Time : 0

Correct Marks : 5 Wrong Marks : 1

Question Key Details :

Key	Value
Comprehension	MCQ

Arrange the organizational structure / hierarchy followed by housekeeping department from top to bottom.

- A. Assistant housekeeper
- B. Room attendant
- C. Executive housekeeper
- D. Housemen
- E. Floor supervisor

Choose the correct answer from the options given below:

1. A, B, C, D, E
2. C, A, E, D, B
3. A, C, E, B, D
4. C, A, E, B, D

Options :

485584146237. 1
485584146238. 2
485584146239. 3
485584146240. 4

Question Number : 175 Question Id : 48558436560 Question Type : MCQ Option Shuffling : No Is Question Mandatory : No Calculator : None Response Time : N.A Think Time : N.A Minimum Instruction Time : 0

Correct Marks : 5 Wrong Marks : 1

Question Key Details :

Key	Value
-----	-------

ସଂଜ୍ଞା ଗଠନ/ ସାହା ଗୃହ ଗଠନା ବିଭାଗ ଅଧୀନରେ ରହେ, ତାକୁ ତତନୁ ଚଳ ପର୍ଯ୍ୟନ୍ତ କ୍ରମାବଳରେ ସଜାଡ଼ି ଲେଖା।

- A. ସହାୟକ ଗୃହଗଣା
- B. କଣ ଗଣକ
- C. ଗୃହଗଣା ପରିଚାଳକ
- D. ଗୃହକର୍ମା
- E. ଚଟାଣ ପରିଦର୍ଶକ

ନିମ୍ନଲିଖିତ ବିକଳ୍ପ ମଧ୍ୟରୁ ସଠିକ୍ ଉତ୍ତରଟି ଚାଛନ୍ତୁ:

- 1. A, B, C, D, E
- 2. C, A, E, D, B
- 3. A, C, E, B, D
- 4. C, A, E, B, D

Options :

- 485584146237. 1
- 485584146238. 2
- 485584146239. 3
- 485584146240. 4

Question Number : 176 Question Id : 48558436561 Question Type : MCQ Option Shuffling : No Is Question Mandatory : No Calculator : None Response Time : N.A Think Time : N.A Minimum Instruction Time : 0

Correct Marks : 5 Wrong Marks : 1

Question Key Details :

Key	Value
Comprehension	MCQ

Give the correct sequence of different stages of apparel production.

- A. Finishing and packaging
- B. Procurement and inspection of raw material
- C. Laying and cutting of fabric / material
- D. Assembly of the product

Choose the correct answer from the options given below:

- 1. A, B, C, D
- 2. B, A, C, D
- 3. D, A, B, C
- 4. B, C, D, A

Options :

- 485584146241. 1

485584146242. 2
485584146243. 3
485584146244. 4

Question Number : 176 Question Id : 48558436561 Question Type : MCQ Option Shuffling : No Is Question Mandatory : No Calculator : None Response Time : N.A Think Time : N.A Minimum Instruction Time : 0

Correct Marks : 5 Wrong Marks : 1

Question Key Details :

Key	Value
Comprehension	MCQ

ପୋଷାକ ଉତ୍ପାଦନର ବିଭିନ୍ନ ସ୍ତରକୁ ଗ୍ରହଣରେ ସଜାଡ଼ି ଲେଖା।

- A. ଶେଷ କରିବା ଓ ପେନେଲ କରିବା
- B. ଜଞ୍ଜାମାକୁ ଉ ପରିବର୍ତ୍ତନ
- C. ଫୋଡ଼ିକ/ ବସ୍ତୁକୁ ପତେଇବା ଓ ଭାବିବା
- D. ସମସ୍ତ ଉତ୍ପାଦକୁ ଏକତ୍ରିତ କରିବା

ନିମ୍ନଲିଖିତ ବିକଳ୍ପ ମଧ୍ୟରୁ ସଠିକ୍ ଉତ୍ତରଟି ଚାହାନ୍ତୁ:

- 1. A, B, C, D
- 2. B, A, C, D
- 3. D, A, B, C
- 4. B, C, D, A

Options :

485584146241. 1
485584146242. 2
485584146243. 3
485584146244. 4

Question Number : 177 Question Id : 48558436562 Question Type : MCQ Option Shuffling : No Is Question Mandatory : No Calculator : None Response Time : N.A Think Time : N.A Minimum Instruction Time : 0

Correct Marks : 5 Wrong Marks : 1

Question Key Details :

Key	Value
Comprehension	MCQ

Arrange the given steps of nutritional care during illness in the correct sequence.

- A. Assessing nutritional status
- B. Planning and prioritising nutrition intervention(s)
- C. Diagnosis of nutritional problems
- D. Making changes in the nutritional care outcomes, if necessary
- E. Evaluating nutritional care outcomes

Choose the correct answer from the options given below:

- 1. C, B, A, D, E
- 2. C, E, B, A, D
- 3. A, C, B, E, D
- 4. A, C, B, D, E

Options :

- 485584146245. 1
- 485584146246. 2
- 485584146247. 3
- 485584146248. 4

Question Number : 177 Question Id : 48558436562 Question Type : MCQ Option Shuffling : No Is Question Mandatory : No Calculator : None Response Time : N.A Think Time : N.A Minimum Instruction Time : 0

Correct Marks : 5 Wrong Marks : 1

Question Key Details :

Key	Value
Comprehension	MCQ

ରୋଗରେ ପଡ଼ିଥିବା ସମୟରେ ପୋଷଣ ସଦୃଶ ସ୍ତର ରୁଚିକୁ ଜୁମାନ୍ତୁଣରେ ସଜାଡ଼ି ଲେଖା

- A. ପୋଷଣ ଆବଶ୍ୟକତାକୁ ପରୀକ୍ଷା କରିବା
- B. ପୋଷଣ ଓ ପୋଷଣ ହସ୍ତକ୍ଷେପରେ ପ୍ରାଧିକାରୀ ଦେବା
- C. ପୋଷଣ ସମସ୍ୟାକୁ ଚିହ୍ନଟ କରିବା
- D. ପୋଷଣ ସେବାରେ ପରିବର୍ତ୍ତନ ଆଣିବା, ଯଦି ଆବଶ୍ୟକ ହୁଏ
- E. ପୋଷଣ ସେବାର ଫଳାଫଳକୁ ପରୀକ୍ଷା କରିବା

ନିମ୍ନଲିଖିତ ବିକଳ ମଧ୍ୟରୁ ସଠିକ୍ ଉତ୍ତରଟି ବାଛନ୍ତୁ:

- 1. C, B, A, D, E
- 2. C, E, B, A, D
- 3. A, C, B, E, D
- 4. A, C, B, D, E

Options :

- 485584146245. 1
- 485584146246. 2

485584146247. 3

485584146248. 4

Question Number : 178 Question Id : 48558436563 Question Type : MCQ Option Shuffling : No Is Question Mandatory : No Calculator : None Response Time : N.A Think Time : N.A Minimum Instruction Time : 0

Correct Marks : 5 Wrong Marks : 1

Question Key Details :

Key	Value
Comprehension	MCQ

Which of the following is NOT a department/sector in hospitality industry?

1. Recruitment and staffing
2. Entertainment and recreation
3. Accommodation or front office
4. Food and beverage service

Options :

485584146249. 1

485584146250. 2

485584146251. 3

485584146252. 4

Question Number : 178 Question Id : 48558436563 Question Type : MCQ Option Shuffling : No Is Question Mandatory : No Calculator : None Response Time : N.A Think Time : N.A Minimum Instruction Time : 0

Correct Marks : 5 Wrong Marks : 1

Question Key Details :

Key	Value
Comprehension	MCQ

ନିମ୍ନଲିଖିତ ମଧ୍ୟରୁ କେଉଁଟି ସେବାୟତ କାରଖାନାର ବିଭାଗୀୟ ସେକ୍ଟର ନୁହେଁ

1. ନିଯୁକ୍ତି ଓ କର୍ମଚାରୀ
2. ମନୋରଞ୍ଜନ ଓ ଅବକାଶ
3. ଆବାସ ବିଦ୍ୟା ସମୂହ କାର୍ଯ୍ୟାଳୟ
4. ଗାଦ୍ୟ ଏବଂ ପାନୀୟ ସେବା

Options :

485584146249. 1

485584146250. 2

485584146251. 3

485584146252. 4

Question Number : 179 Question Id : 48558436564 Question Type : MCQ Option Shuffling : No Is Question Mandatory : No Calculator : None Response Time : N.A Think Time : N.A Minimum Instruction Time : 0

Correct Marks : 5 Wrong Marks : 1

Question Key Details :

Key	Value
Comprehension	MCQ

Which of the following falls under the category of rewards given to sustain high performance employees in an organisation ?

- A. Paid holidays
- B. Tax incentives
- C. Financial packages for children's education
- D. Financial compensation like driver's wages
- E. Disability insurance

Choose the correct answer from the options given below:

- 1. A, C and E only
- 2. A, C and D only
- 3. A, D and E only
- 4. B, C and D only

Options :

- 485584146253. 1
- 485584146254. 2
- 485584146255. 3
- 485584146256. 4

Question Number : 179 Question Id : 48558436564 Question Type : MCQ Option Shuffling : No Is Question Mandatory : No Calculator : None Response Time : N.A Think Time : N.A Minimum Instruction Time : 0

Correct Marks : 5 Wrong Marks : 1

Question Key Details :

Key	Value
Comprehension	MCQ

ଗୋଟିଏ ସଂସ୍ଥାର ଉଚ୍ଚବୟସ୍କ ସମ୍ପଦ କର୍ମଚାରୀ ଯିଏକି ନିମ୍ନଲିଖିତ ଦୁଇଟି ପ୍ରକାର ଭେଦ ଅଟନ୍ତି:

- A. କ୍ଷୁଦ୍ର ଦିନର ପ୍ରାପ୍ୟ
- B. ଚିକିତ୍ସା ଛାଡ଼ି ଦେବା
- C. ଶିଶୁ ଶିକ୍ଷା ପାଇଁ ଆର୍ଥିକ ପ୍ରାବେଳ
- D. ଆର୍ଥିକ ଅନୁକମ୍ପା (ଡ୍ରାଜିଭର ଓ ପାରିଶ୍ରମିକ ପରି)
- E. ଅକ୍ଷମ ବାମା

ନିମ୍ନଲିଖିତ ବିକଳ୍ପ ମଧ୍ୟରୁ ସଠିକ୍ ଉତ୍ତରଟି ଚାହନ୍ତୁ:

- 1. ଉତ୍ତର A, C ଏବଂ E
- 2. ଉତ୍ତର A, C ଏବଂ D
- 3. ଉତ୍ତର A, D ଏବଂ E
- 4. ଉତ୍ତର B, C ଏବଂ D

Options :

- 485584146253. 1
- 485584146254. 2
- 485584146255. 3
- 485584146256. 4

Question Number : 180 Question Id : 48558436565 Question Type : MCQ Option Shuffling : No Is Question Mandatory : No Calculator : None Response Time : N.A Think Time : N.A Minimum Instruction Time : 0

Correct Marks : 5 Wrong Marks : 1

Question Key Details :

Key	Value
Comprehension	MCQ

Which of the following is NOT a function of human resources/ talent management?

- 1. Marketing management
- 2. Getting the best employees
- 3. Retention and redressal
- 4. Training and developing employees

Options :

- 485584146257. 1
- 485584146258. 2
- 485584146259. 3
- 485584146260. 4

Question Number : 180 Question Id : 48558436565 Question Type : MCQ Option Shuffling : No Is Question Mandatory : No Calculator : None Response Time : N.A Think Time : N.A Minimum Instruction Time : 0

Correct Marks : 5 Wrong Marks : 1

Question Key Details :

Key	Value
Comprehension	MCQ

ନିମ୍ନଲିଖିତ ମଧ୍ୟରୁ କେଉଁଟି ମାନବ ଶକ୍ତି ପରିଚାଳନାର କାର୍ଯ୍ୟ ବୁଝେ?

1. ବଜାର ପରିଚାଳନା
2. ଭଲ କର୍ମଚାରୀ ପାଇବା
3. ରହିବା ଓ ପ୍ରତିକାର
4. ପ୍ରଶିକ୍ଷଣ ଓ ବିକଶିତ କର୍ମଚାରୀ

Options :

485584146257. 1
485584146258. 2
485584146259. 3
485584146260. 4

Question Number : 181 Question Id : 48558436566 Question Type : MCQ Option Shuffling : No Is Question Mandatory : No Calculator : None Response Time : N.A Think Time : N.A Minimum Instruction Time : 0

Correct Marks : 5 Wrong Marks : 1

Question Key Details :

Key	Value
Comprehension	MCQ

A diet can be modified to meet the medical needs of a patient through which of the following?

- A. Changing consistency and/or texture
- B. Adding supplements
- C. Increase or decrease in the amount of one or more nutrients
- D. Increase or decrease in calorie intake
- E. Making an all fruit diet

Choose the correct answer from the options given below:

1. A, B and E only
2. A, C and E only
3. B, C and D only
4. A, C and D only

Options :

485584146261. 1
485584146262. 2
485584146263. 3
485584146264. 4

Question Number : 181 Question Id : 48558436566 Question Type : MCQ Option Shuffling : No Is Question Mandatory : No Calculator : None Response Time : N.A Think Time : N.A Minimum Instruction Time : 0

Correct Marks : 5 Wrong Marks : 1

Question Key Details :

Key	Value
Comprehension	MCQ

ରୋଡିଏ ରୋଗୀ ପାଇଁ ଶାନ୍ତ ଶାନ୍ତ ପରିବର୍ତ୍ତନ କାର୍ତ୍ତବ୍ୟ ପରାମର୍ଶ ଅନୁପାୟା ହୋଇଥାଏ। ନିମ୍ନଲିଖିତ ମଧ୍ୟରୁ କେଉଁଟି କୁ ନେଇ ଏହା ହୋଇଥାଏ।

- A. ଅନୁପାଳନ ଓ ମୂଳ ଉପାଦାନ
- B. କିଛି ପରିପୁରକ ଯୋଗେଇବା
- C. ରୋଡିଏ ବିମ୍ବା ଅଧିକ ପୋଷଣର ପରିମାଣ ବଢ଼ିବା ଓ କମିବା
- D. କ୍ୟାଲୋରି ଗ୍ରହଣ ର ବଢ଼ିବା ଓ କମିବା
- E. ସମ୍ପୂର୍ଣ୍ଣ ଫଳ ପୋଷଣ

ନିମ୍ନଲିଖିତ ବିକଳ ମଧ୍ୟରୁ ସଠିକ୍ ଉତ୍ତରଟି ବାଛନ୍ତୁ:

- 1. କେବଳ A, B ଏବଂ E
- 2. କେବଳ A, C ଏବଂ E
- 3. କେବଳ B, C ଏବଂ D
- 4. କେବଳ A, C ଏବଂ D

Options :

- 485584146261. 1
- 485584146262. 2
- 485584146263. 3
- 485584146264. 4

Question Number : 182 Question Id : 48558436567 Question Type : MCQ Option Shuffling : No Is Question Mandatory : No Calculator : None Response Time : N.A Think Time : N.A Minimum Instruction Time : 0

Correct Marks : 5 Wrong Marks : 1

Question Key Details :

Key	Value
Comprehension	MCQ

Shreya wants to design a dress by incorporating rhythm design principle. Which of the following can NOT be used to create rhythm?

- 1. Use of contrasting colours
- 2. Cordation
- 3. Radiation
- 4. Parallelism

Options :

- 485584146265. 1

485584146266. 2
485584146267. 3
485584146268. 4

Question Number : 182 Question Id : 48558436567 Question Type : MCQ Option Shuffling : No Is Question Mandatory : No Calculator : None Response Time : N.A Think Time : N.A Minimum Instruction Time : 0

Correct Marks : 5 Wrong Marks : 1

Question Key Details :

Key	Value
Comprehension	MCQ

ଶ୍ରେଣୀ ଗୋଟିଏ ଚତୁର୍ଥ ଚିରମ ତାଙ୍କ ଭିତ୍ତାଭିତ୍ତ ଅର୍ମରେ କରିବାକୁ ଚାହଁନ୍ତି। ନିମ୍ନଲିଖିତ ମଧ୍ୟରୁ କେଉଁଟି ତାଙ୍କ ସୃଷ୍ଟି କରେ ନାହିଁ?

1. ବିପରିତ ରଙ୍ଗର ବ୍ୟବହାର
2. ଠିକ୍ ରଙ୍ଗର ବ୍ୟବହାର
3. ଗଭୋହିତ
4. ସମତା ରକ୍ଷା କରିବା

Options :

485584146265. 1
485584146266. 2
485584146267. 3
485584146268. 4

Question Number : 183 Question Id : 48558436568 Question Type : MCQ Option Shuffling : No Is Question Mandatory : No Calculator : None Response Time : N.A Think Time : N.A Minimum Instruction Time : 0

Correct Marks : 5 Wrong Marks : 1

Question Key Details :

Key	Value
Comprehension	MCQ

Identify the aspects relating to care and maintenance of fabrics:

- A. Keeping the material free of physical damage
- B. Discard clothes if any damage occurs
- C. Refreshing or retaining the appearance by removing stains and dirt
- D. Retaining the textural and visual characteristics
- E. Changing the visual characteristics

Choose the correct answer from the options given below:

1. A, B and C only
2. B, C and D only
3. C, D and E only
4. A, C and D only

Options :

485584146269. 1
485584146270. 2
485584146271. 3
485584146272. 4

Question Number : 183 Question Id : 48558436568 Question Type : MCQ Option Shuffling : No Is Question Mandatory : No Calculator : None Response Time : N.A Think Time : N.A Minimum Instruction Time : 0

Correct Marks : 5 Wrong Marks : 1

Question Key Details :

Key	Value
Comprehension	MCQ

ଯଦି ଓ ଯେତେବେଳେ ମେଘେନ ଉତ୍ପତ୍ତି ଚିହ୍ନଟି କର :

- A. ଶାରୀରିକ ନିର୍ମୂଳ ପ୍ରକାରକୁ ବଞ୍ଚେଇ ରଖିବା
- B. କୌଣସି ନିର୍ମୂଳ ବାହାରିଲେ ଲୁଗାକୁ ଗଢ଼ି ଦେବା
- C. ଗଢ଼ିଆ ମାତାକୁ ଉତ୍ତେଜିତ କାଗା ପ୍ରକାରକୁ ଉତ୍ତେଜିତ ଓ ଉତ୍ତେଜିତ କରିବା
- D. ଦୁର୍ଗମମାନ ଲୁଗା ବଞ୍ଚେଇ ରଖିବା
- E. ଦୁର୍ଗମଲୁଗାକୁ ପରିଚାଳନା କରିବା

ନିମ୍ନଲିଖିତ ବିକଳ୍ପ ମଧ୍ୟରୁ ସଠିକ୍ ଉତ୍ତରଟି ବାଛିନ୍ତୁ :

- 1. କେବଳ A, B ଏବଂ C
- 2. କେବଳ B, C ଏବଂ D
- 3. କେବଳ C, D ଏବଂ E
- 4. କେବଳ A, C ଏବଂ D

Options :

485584146269. 1
485584146270. 2
485584146271. 3
485584146272. 4

Question Number : 184 Question Id : 48558436569 Question Type : MCQ Option Shuffling : No Is Question Mandatory : No Calculator : None Response Time : N.A Think Time : N.A Minimum Instruction Time : 0

Correct Marks : 5 Wrong Marks : 1

Question Key Details :

Key	Value
Comprehension	MCQ

Which of the following does NOT fall under the category of straight lines ?

1. Vertical
2. Zig-zag
3. Horizontal
4. Diagonal

Options :

485584146273. 1
485584146274. 2
485584146275. 3
485584146276. 4

Question Number : 184 Question Id : 48558436569 Question Type : MCQ Option Shuffling : No Is Question Mandatory : No Calculator : None Response Time : N.A Think Time : N.A Minimum Instruction Time : 0

Correct Marks : 5 Wrong Marks : 1

Question Key Details :

Key	Value
Comprehension	MCQ

ନିମ୍ନଲିଖିତ ମଧ୍ୟରୁ କେଉଁଟି ସିଧା ଆଡ଼ିର ବିଭାଜନିତତା ନୁହେଁ?

1. Vertical
2. Zig-zag
3. Horizontal
4. Diagonal

Options :

485584146273. 1
485584146274. 2
485584146275. 3
485584146276. 4

Question Number : 185 Question Id : 48558436570 Question Type : MCQ Option Shuffling : No Is Question Mandatory : No Calculator : None Response Time : N.A Think Time : N.A Minimum Instruction Time : 0

Correct Marks : 5 Wrong Marks : 1

Question Key Details :

Key	Value
Comprehension	MCQ

Match List I with List II

LIST I (Processed foods)	LIST II (Examples)
A. Preserved foods	I. Low sodium salt
B. Manufactured foods	II. Canned fruits
C. Formulated foods	III. Papads
D. Medical foods	IV. Ice creams

Choose the correct answer from the options given below:

1. A-I, B-II, C-III, D-IV
2. A-II, B-III, C-I, D-IV
3. A-III, B-II, C-I, D-IV
4. A-II, B-III, C-IV, D-I

Options :

485584146277. 1
485584146278. 2
485584146279. 3
485584146280. 4

Question Number : 185 Question Id : 48558436570 Question Type : MCQ Option Shuffling : No Is Question Mandatory : No Calculator : None Response Time : N.A Think Time : N.A Minimum Instruction Time : 0

Correct Marks : 5 Wrong Marks : 1

Question Key Details :

Key	Value
Comprehension	MCQ

ଉତ୍ତର ଦିଅନ୍ତୁ ଯାହା ସଠିକ୍ ଉତ୍ତର ଦେଖାଏ ।

ଉତ୍ତର I (ଉତ୍ତର ପ୍ରକାର)	ଉତ୍ତର II (ଉଦାହରଣ)
A. ସଂରକ୍ଷିତ ଉତ୍ତର	I. ନିମ୍ନ ସୋଡ଼ିୟମ ଉତ୍ତର
B. ଉତ୍ପାଦିତ ଉତ୍ତର	II. କ୍ୟାନ୍ସନ୍ ଫଳ
C. ଉତ୍ତର ଉତ୍ତର	III. ପାପାଡ଼
D. ଉତ୍ତର ଉତ୍ତର	IV. ଆଇସ୍ କ୍ରିମ୍

ନିମ୍ନଲିଖିତ ବିକଳ୍ପ ମଧ୍ୟରୁ ସଠିକ୍ ଉତ୍ତର ଚିହ୍ନଟି ଚିହ୍ନଟି କରନ୍ତୁ :

1. A-I, B-II, C-III, D-IV
2. A-II, B-III, C-I, D-IV
3. A-III, B-II, C-I, D-IV
4. A-II, B-III, C-IV, D-I

Options :

- 485584146277. 1
- 485584146278. 2
- 485584146279. 3
- 485584146280. 4

Question Number : 186 Question Id : 48558436571 Question Type : MCQ Option Shuffling : No Is Question Mandatory : No Calculator : None Response Time : N.A Think Time : N.A Minimum Instruction Time : 0

Correct Marks : 5 Wrong Marks : 1

Question Key Details :

Key	Value
Comprehension	MCQ

Match List I with List II

LIST I (Terms)		LIST II (Explanation)	
A.	Food Quality	I.	Assurance that food will not cause any harm to the consumers
B.	Toxicity	II.	Relative probability that harm or injury will result when substance is not used in prescribed manner and quantity
C.	Food Safety	III.	Capacity of a substance to produce harm or injury of any kind under any conditions
D.	Hazard	IV.	Attributes that influence a product's value to consumers

Choose the correct answer from the options given below:

1. A-IV, B-III, C-I, D-II
2. A-I, B-II, C-III, D-IV
3. A-I, B-IV, C-II, D-III
4. A-IV, B-III, C-II, D-I

Options :

- 485584146281. 1
- 485584146282. 2
- 485584146283. 3
- 485584146284. 4

Question Number : 186 Question Id : 48558436571 Question Type : MCQ Option Shuffling : No Is Question Mandatory : No Calculator : None Response Time : N.A Think Time : N.A Minimum Instruction Time : 0

Correct Marks : 5 Wrong Marks : 1

Question Key Details :

Key	Value
Comprehension	MCQ

ଦୁଇଟି ତାଲିକାର ଉଚିତ ସଂଯୋଗ କର

ତାଲିକା I		ତାଲିକା II	
A.	ଆତ୍ୟନ୍ତ ପ୍ରଶଂସନୀୟ	I.	ଆଶ୍ଚାଚ୍ଚରୀୟ ଯେଉଁ ଯେ ଆତ୍ୟନ୍ତ ଶାନ୍ତତାର କାରଣରୁ ଉଚିତ କରାଯାଇ ନାହିଁ
B.	ବିଶ୍ରାନ୍ତ	II.	ପାଖାପାଖି ସମାପ୍ତ ଅଛି ଯେ ଯେତେବେଳେ ଉପାଦାନ ଠିକ୍ ଭାବେ ଓ ଗୁଣବତ୍ତା ଭାବେ ବ୍ୟବହାର ହୁଏ ନାହିଁ ତେବେ ଉପାଦାନ ଉଚିତ ପ୍ରଭାବିତ ହୁଏ
C.	ଆତ୍ୟନ୍ତ ସୁରକ୍ଷା	III.	ଉପାଦାନର ବର୍ତ୍ତମାନ ଶ୍ରଦ୍ଧାଭାବନ ଓ ଯେକୌଣସି ପ୍ରକାରେ ଶ୍ରଦ୍ଧାପ୍ରସ୍ତୁତ ହୁଏ
D.	ବିପଦ	IV.	ଗୁଣ ଗୁଣିତ ପାଠ୍ୟ ଉପାଦାନ ଗୁଣ ଶାନ୍ତତାରୁ ପ୍ରଭାବିତ କରେ

ନିମ୍ନଲିଖିତ ବିକଳ୍ପ ମଧ୍ୟରୁ ସଠିକ୍ ଉତ୍ତରଟି ଚାହୁଁ:

1. A-IV, B-III, C-I, D-II
2. A-I, B-II, C-III, D-IV
3. A-I, B-IV, C-II, D-III
4. A-IV, B-III, C-II, D-I

Options :

485584146281. 1
 485584146282. 2
 485584146283. 3
 485584146284. 4

Question Number : 187 Question Id : 48558436572 Question Type : MCQ Option Shuffling : No Is Question Mandatory : No Calculator : None Response Time : N.A Think Time : N.A Minimum Instruction Time : 0

Correct Marks : 5 Wrong Marks : 1

Question Key Details :

Key	Value
Comprehension	MCQ

Match List I with List II

LIST I (Extension Projects)		LIST II (Communication tools used)	
A.	RRE	I.	Satellite
B.	SEWA	II.	Print media
C.	Project Village Chhatara	III.	Campaign
D.	EDUSAT	IV.	ICT

Choose the correct answer from the options given below:

1. A-II, B-I, C-IV, D-III
2. A-IV, B-I, C-III, D-II
3. A-III, B-IV, C-II, D-I
4. A-II, B-III, C-I, D-IV

Options :

- 485584146285. 1
- 485584146286. 2
- 485584146287. 3
- 485584146288. 4

Question Number : 187 Question Id : 48558436572 Question Type : MCQ Option Shuffling : No Is Question Mandatory : No Calculator : None Response Time : N.A Think Time : N.A Minimum Instruction Time : 0

Correct Marks : 5 Wrong Marks : 1

Question Key Details :

Key	Value
Comprehension	MCQ

ତାଲିକା 1 ସହିତ ତାଲିକା 2 କୁ ସଂଯୋଗ କରନ୍ତୁ

LIST I (Extension Projects)		LIST II (Communication tools used)	
A.	RRE	I.	Satellite
B.	SEWA	II.	Print media
C.	Project Village Chhatara	III.	Campaign
D.	EDUSAT	IV.	ICT

Choose the correct answer from the options given below:

- 1. A-II, B-I, C-IV, D-III
- 2. A-IV, B-I, C-III, D-II
- 3. A-III, B-IV, C-II, D-I
- 4. A-II, B-III, C-I, D-IV

Options :

- 485584146285. 1
- 485584146286. 2
- 485584146287. 3
- 485584146288. 4

Question Number : 188 Question Id : 48558436573 Question Type : MCQ Option Shuffling : No Is Question Mandatory : No Calculator : None Response Time : N.A Think Time : N.A Minimum Instruction Time : 0

Correct Marks : 5 Wrong Marks : 1

Question Key Details :

Key	Value
Comprehension	MCQ

Match List I with List II

LIST I (Terms)		LIST II (Description)	
A.	Quality Assurance	I.	Process of implementation and monitoring of quality systems like TQM, ISO
B.	Quality control	II.	Process of problem solving with the purpose of getting a 'zero-defect' product
C.	Quality Management	III.	Characteristics of the product that are given by the buyer or desired by the consumer
D.	Specifications	IV.	Process of preventive problem management

Choose the correct answer from the options given below:

1. A-IV, B-II, C-I, D-III
2. A-IV, B-I, C-II, D-III
3. A-IV, B-II, C-III, D-I
4. A-I, B-II, C-IV, D-III

Options :

485584146289. 1
485584146290. 2
485584146291. 3
485584146292. 4

Question Number : 188 Question Id : 48558436573 Question Type : MCQ Option Shuffling : No Is Question Mandatory : No Calculator : None Response Time : N.A Think Time : N.A Minimum Instruction Time : 0

Correct Marks : 5 Wrong Marks : 1

Question Key Details :

Key	Value
Comprehension	MCQ

ସଠିକ୍ ଭାବରେ ସଂଯୋଗ କର

ତାଲିକା I		ତାଲିକା II	
A.	ଗୁଣବତ୍ତା ପ୍ରତିଷ୍ଠିତି	I.	ଗୁଣବତ୍ତା ପ୍ରତିଷ୍ଠାତ ନିୟନ୍ତ୍ରଣ ଓ ପରିଚାଳନା ଯେପରି TQM, ISO
B.	ଗୁଣବତ୍ତା ନିୟନ୍ତ୍ରଣ	II.	ସମସ୍ତା ସମାଧାନ ପ୍ରକ୍ରିୟା ସାହା ଶୂନ୍ୟ ତ୍ରୁଟିପୂର୍ଣ୍ଣ ଉତ୍ପାଦ ପାଇବାର ଉଦ୍ଦେଶ୍ୟ
C.	ଗୁଣବତ୍ତା ପରିଚାଳନା	III.	ତ୍ରୁଟିପୂର୍ଣ୍ଣ ଉତ୍ପାଦର ସୁଖ ସାହା ଦ୍ରୋତକୁ ବିଆସାଏ ଓ ଆଗତି ଉଚ୍ଚତା ଦ୍ୱାରା ହୁଏ
D.	ନିର୍ଦ୍ଦିଷ୍ଟ	IV.	ସମସ୍ତା ପରିଚାଳନା ନିୟନ୍ତ୍ରଣ ପ୍ରକ୍ରିୟା

ନିମ୍ନଲିଖିତ ବିକଳ୍ପ ମଧ୍ୟରୁ ସଠିକ୍ ଉତ୍ତରଟି ବାଛନ୍ତୁ:

1. A-IV, B-II, C-I, D-III
2. A-IV, B-I, C-II, D-III
3. A-IV, B-II, C-III, D-I
4. A-I, B-II, C-IV, D-III

Options :

485584146289. 1

485584146290. 2
485584146291. 3
485584146292. 4

Question Number : 189 Question Id : 48558436574 Question Type : MCQ Option Shuffling : No Is Question Mandatory : No Calculator : None Response Time : N.A Think Time : N.A Minimum Instruction Time : 0

Correct Marks : 5 Wrong Marks : 1

Question Key Details :

Key	Value
Comprehension	MCQ

Match List I with List II

LIST I (Designations)		LIST II (Duties)	
A. Head waiter	I.	Reserves, registers and assign rooms to guests	
B. Chef-de-cuisine	II.	Supervisors for some sections of the kitchen	
C. Receptionist	III.	Lead a team of waiters/stewards	
D. Chef-de-parties	IV.	Planning, organising and controlling the kitchen operations	

Choose the correct answer from the options given below:

1. A-III, B-IV, C-I, D-II
2. A-II, B-IV, C-III, D-I
3. A-I, B-II, C-III, D-IV
4. A-IV, B-II, C-I, D-III

Options :

485584146293. 1
485584146294. 2
485584146295. 3
485584146296. 4

Question Number : 189 Question Id : 48558436574 Question Type : MCQ Option Shuffling : No Is Question Mandatory : No Calculator : None Response Time : N.A Think Time : N.A Minimum Instruction Time : 0

Correct Marks : 5 Wrong Marks : 1

Question Key Details :

Key	Value
Comprehension	MCQ

ତାଲିକାର ସଠିକ୍ ସଂଯୋଗ କର

ତାଲିକା I (ପଦ୍ୟ)		ତାଲିକା II (କର୍ତ୍ତବ୍ୟ)	
A.	ସ୍ୱାସ୍ଥ୍ୟ ସେବକ	I.	ସଂଗଠିତ, ପଞ୍ଜୀକରଣ ଓ ଅଭିଭାବକ ଦ୍ୱାରା
B.	ଚିତ୍ର-ଫି-କୋର୍ସିଡ	II.	କୋଷ୍ଠକାରୀଙ୍କ ରୁଚିତ ବିଭାଗର ପରିଚାଳକ
C.	ସ୍ତ୍ରୀମତ କଣ୍ଠ ପରିଚାଳକ	III.	କୋର୍ସିଡ୍ ଦେ ପରିଚାଳକ
D.	ଚିତ୍ର-ଫି-ପାଠିକ	IV.	ଯୋଜନା, ସଂଗଠିତ ଓ ବିକାଶିତ କୋଷ୍ଠକାରୀ ପରିଚାଳକ

ନିମ୍ନଲିଖିତ ବିକଳ୍ପ ମଧ୍ୟରୁ ସଠିକ୍ ଉତ୍ତରଟି ଚାଛନ୍ତୁ:

1. A-III, B-IV, C-I, D-II
2. A-II, B-IV, C-III, D-I
3. A-I, B-II, C-III, D-IV
4. A-IV, B-II, C-I, D-III

Options :

485584146293. 1
485584146294. 2
485584146295. 3
485584146296. 4

Question Number : 190 Question Id : 48558436575 Question Type : MCQ Option Shuffling : No Is Question Mandatory : No Calculator : None Response Time : N.A Think Time : N.A Minimum Instruction Time : 0

Correct Marks : 5 Wrong Marks : 1

Question Key Details :

Key	Value
Comprehension	MCQ

Match List I with List II

LIST I (Programme)	LIST II (Target group)
A. ICDS	I. Children under 18 years of age
B. SOS	II. College going students
C. Special homes	III. Children below six years of age
D. NSS	IV. Needy/abandoned children

Choose the correct answer from the options given below:

1. A-I, B-IV, C-II, D-I
2. A-IV, B-III, C-I, D-II
3. A-III, B-IV, C-I, D-II
4. A-IV, B-III, C-II, D-I

Options :

485584146297. 1
 485584146298. 2
 485584146299. 3
 485584146300. 4

Question Number : 190 Question Id : 48558436575 Question Type : MCQ Option Shuffling : No Is Question Mandatory : No Calculator : None Response Time : N.A Think Time : N.A Minimum Instruction Time : 0

Correct Marks : 5 Wrong Marks : 1

Question Key Details :

Key	Value
Comprehension	MCQ

ସଂଗୋଳ କର

ଖଣ୍ଡକ I		ଖଣ୍ଡକ II	
A.	CDS	I.	ଶିଶୁ ଯିଏ 18 ବର୍ଷ ତଳେ ଥିବେ
B.	SOS	II.	ମହାବିଦ୍ୟାଳୟର ଉଚ୍ଚ ଛାତ୍ର-ଛାତ୍ରୀ
C.	Special homes	III.	ଶିଶୁ ଯିଏ 5 ବର୍ଷ ତଳେ ଥିବେ
D.	NSS	IV.	ବରଦାଗାଆବଣ୍ୟକ ଶିଶୁ

ସଠିକ୍ ଉତ୍ତର ବାଛି ଲେଖ

1. A-I, B-IV, C-II, D-I
2. A-IV, B-III, C-I, D-II
3. A-III, B-IV, C-I, D-II
4. A-IV, B-III, C-II, D-I

Options :

485584146297. 1
 485584146298. 2
 485584146299. 3
 485584146300. 4

Sub-Section Number : 2
Sub-Section Id : 4855842700
Question Shuffling Allowed : No
Is Section Default? : null

Question Number : 191 Question Id : 48558436576 Question Type : MCQ Option Shuffling : No Is Question Mandatory : No Calculator : None Response Time : N.A Think Time : N.A Minimum Instruction Time : 0

Correct Marks : 5 Wrong Marks : 1

Question Key Details :

Key	Value
Comprehension	Comp1

Read the passage carefully. Attempt Question

Anganwadi Centers (AWCs) are the most common and publicly available facilities, initially constituted in 1975 to strengthen the public health system by providing immunization and health check-ups, and later to provide supplementary nutrition non-formal pre-school education and day-care.

The two key elements of early childhood development include education and health. A child's early years (0 to 8 years) form the foundation of all learning and are therefore the most extraordinary period of development in a child's life. Research has shown that greater cognitive abilities and being developmentally on track with literacy and numeracy in childhood provide for better learning in school and higher educational attainment, leading to major social and economic gains for society in the long run. Similarly, providing children with a nurturing environment in early years, with adequate nutrition, hygiene, protection and responsive stimulation, boosts healthy childhood development and delivers positive outcomes.

The Anganwadi centers were started in which year in India?

- 1. 1975
- 2. 1980
- 3. 1982
- 4. 1984

Options :

- 485584146301. 1
- 485584146302. 2
- 485584146303. 3
- 485584146304. 4

Question Number : 191 Question Id : 48558436576 Question Type : MCQ Option Shuffling : No Is Question Mandatory : No Calculator : None Response Time : N.A Think Time : N.A Minimum Instruction Time : 0

Correct Marks : 5 Wrong Marks : 1

Question Key Details :

Key	Value
Comprehension	Compl

ଅଙ୍ଗନବାଡ଼ି (AWC) ଗୋଟିଏ ବହୁତ ସାଧାରଣ ଏବଂ ସମାଜରେ ମିଳୁଥିବା ସୁବିଧା ଏଥିରେ ଅନ୍ତର୍ଭୁକ୍ତ। ଏହା 1975 ମସିହାରେ ସୃଷ୍ଟି କାର୍ଯ୍ୟକାରୀ ହୋଇଥିଲା ଯାହାକି ସମାଜର ସ୍ୱାସ୍ଥ୍ୟ ବ୍ୟବସ୍ଥା କୁ ଉନ୍ନତ କରିବା କରେ ଲୋକଙ୍କୁ ରୋଗ ପ୍ରତିରୋଧକ ଏବଂ ସ୍ୱାସ୍ଥ୍ୟ ପରୀକ୍ଷା ଚର୍ଚ୍ଚା ସହିତ ପୋଷକ ଏବଂ ନନ୍-ଫର୍ମାଲ ପୂର୍ବ ବିଦ୍ୟାଳୟ ପାଠ ପଢ଼ା ପ୍ରଦାନ କରିଥାଏ।

ଶୀଘ୍ର ଶିଶୁ ଜନ୍ମରେ ତୁଳନା ମୁଖ୍ୟ ଚାରି ଉପାଦାନ ରହିଛି ଯେ ତୁଳନା ଶିକ୍ଷା ଏବଂ ସ୍ୱାସ୍ଥ୍ୟ ଶିଶୁର ଅଳ୍ପ ବୟସ (0-8 ବର୍ଷ), ଶିକ୍ଷାଗତ ମୂଲ୍ୟ ଏବଂ ଏଠାରେ ଶିଶୁର ଅତି ଅବିଶ୍ୱାସୀୟ ପରିବର୍ତ୍ତନ ଦେଖାଯାଇଥାଏ। ଗବେଷଣାକାରୀମାନେ ଦେଖିଲେ ବହୁତ ଅଧିକ ବୌଦ୍ଧିକ ଗୁଣ ଏବଂ ଶିଶୁ ସମୟରେ ଭାଷାଗତ ଏବଂ ସଂଖ୍ୟାଗତ ସୁଖକୁ ବିଦ୍ୟାଳୟରେ ଭଲ ପାଠପଢ଼ା ପାଇଁ ଏବଂ ଭଲ ଶିକ୍ଷାଗତ ପ୍ରାପ୍ତି ପ୍ରଦାନ କରିଥାଏ। ଏହା ଅଧିକ ସମାଜ ପାଇଁ ଅଧିକ ଜ୍ଞାନ ବ୍ୟାପି ଥାମାନିକତା ଏବଂ ଅର୍ଥ ନୈତିକତା ସୃଷ୍ଟି କରେ। ସମାଜର ହୋଟ ସମୟରେ ପିଲାଙ୍କୁ ଭରଣପୋଷଣର ପରିବେଶ ପ୍ରଦାନ କରେ। ଯାହାକି ପୋଷକ, ସୁସ୍ୱାଦୁ, ସୁରକ୍ଷା ଏବଂ ଦୟାଦେୟତା ସହ ପିଲାଙ୍କ ସ୍ୱାସ୍ଥ୍ୟରେ ଉନ୍ନତି ଏବଂ ସଜାଗତା ଆକର୍ଷଣ ପ୍ରଦାନ କରିଥାଏ।

ଅଙ୍ଗନବାଡ଼ି କେନ୍ଦ୍ର କେଉଁ ମସିହାରେ ଆରମ୍ଭ ହୋଇଥିଲା।

1. 1975
2. 1980
3. 1982
4. 1984

Options :

485584146301. 1
485584146302. 2
485584146303. 3
485584146304. 4

Question Number : 192 Question Id : 48558436577 Question Type : MCQ Option Shuffling : No Is Question Mandatory : No Calculator : None Response Time : N.A Think Time : N.A Minimum Instruction Time : 0

Correct Marks : 5 Wrong Marks : 1

Question Key Details :

Key	Value
Comprehension	Comp1

Read the passage carefully. Attempt Question

Anganwadi Centers (AWCs) are the most common and publicly available facilities, initially constituted in 1975 to strengthen the public health system by providing immunization and health check-ups, and later to provide supplementary nutrition non-formal pre-school education and day-care.

The two key elements of early childhood development include education and health. A child's early years (0 to 8 years) form the foundation of all learning and are therefore the most extraordinary period of development in a child's life. Research has shown that greater cognitive abilities and being developmentally on track with literacy and numeracy in childhood provide for better learning in school and higher educational attainment, leading to major social and economic gains for society in the long run. Similarly, providing children with a nurturing environment in early years, with adequate nutrition, hygiene, protection and responsive stimulation, boosts healthy childhood development and delivers positive outcomes.

Identify the functions of the Anganvadi centres from the following:

- A. Providing immunisation
- B. Supplementary nutrition
- C. Non-formal pre-school education
- D. Supporting children in doing home-work after school

Choose the correct answer from the options given below:

- 1. B, C and D only
- 2. A, B and D only
- 3. A, B and C only
- 4. A, D and C only

Options :

- 485584146305. 1
- 485584146306. 2
- 485584146307. 3
- 485584146308. 4

Question Number : 192 Question Id : 48558436577 Question Type : MCQ Option Shuffling : No Is Question Mandatory : No Calculator : None Response Time : N.A Think Time : N.A Minimum Instruction Time : 0

Correct Marks : 5 Wrong Marks : 1

Question Key Details :

Key	Value
Comprehension	Comp1

ଅଙ୍ଗନବାଡ଼ି (AWC) ଗୋଟିଏ ବହୁତ ସାଧାରଣ ଏବଂ ସମାଜରେ ମିଳୁଥିବା ସୁବିଧା ଏଥିରେ ଅନ୍ତର୍ଭୁକ୍ତ। ଏହା 1975 ମସିହାରେ ସୃଷ୍ଟି କାର୍ଯ୍ୟକାରୀ ହୋଇଥିଲା ଯାହାକି ସମାଜର ସ୍ୱାସ୍ଥ୍ୟ ବ୍ୟବସ୍ଥା କୁ ଉନ୍ନତ କରିବାକୁ ଲକ୍ଷ୍ୟ ରଖିବାକୁ ଗୋଟିଏ ପ୍ରତିରୋଧକ ଏବଂ ସ୍ୱାସ୍ଥ୍ୟ ପରୀକ୍ଷା କରୁ ଅଛିତ ଯୋଗକର ଏବଂ ନନ୍-ଫର୍ମାଲ ପୂର୍ବ ବିଦ୍ୟାଳୟ ପାଠ ପଢ଼ା ପ୍ରଦାନ କରିଥାଏ।

ଶାନ୍ତ ଶିଶୁ ଉତ୍ତରରେ ଦୁଇଟି ମୁଖ୍ୟ ଚାରି ଉପାଦାନ ରହିଛି ଯେ ଦୁଇଟି ଶିକ୍ଷା ଏବଂ ସ୍ୱାସ୍ଥ୍ୟ ଶିକ୍ଷାର ଅନ୍ତ ଉପରେ (0-8 ବର୍ଷ), ଶିକ୍ଷାଗତ ମୂଲ୍ୟ ଏବଂ ଏଠାରେ ଶିଶୁର ଅତି ଅବିଶ୍ୱାସନୀୟ ପରିବର୍ତ୍ତନ ଦେଖାଯାଇଥାଏ। ଗବେଷଣାକାରୀମାନେ ଦେଖିଲେ ବହୁତ ଅଧିକ ବୈଦିକ ଗୁଣ ଏବଂ ଶିଶୁ ସମୟରେ ଲାଭାଗତ ଏବଂ ସଂଗଠନ କୁଶଳ ବିଦ୍ୟାଳୟରେ ଭଲ ପାଠପଢ଼ା ପାଇଁ ଏବଂ ଭଲ ଶିକ୍ଷାଗତ ପ୍ରାପ୍ତି ପ୍ରଦାନ କରିଥାଏ। ଏହା ଅଧିକ ସମାଜ ପାଇଁ ଅଧିକ ଜାଣ ବ୍ୟାପି ଯାମାନିକର ଏବଂ ଅର୍ଥ ନୈତିକତା ସୃଷ୍ଟି କରେ। ସମାଜର ଗୋଟିଏ ସମୟରେ ପିଲାକୁ ଉତ୍ତରଯୋଗ୍ୟର ପରିବେଶ ପ୍ରଦାନ କରେ। ଯାହାକି ଯୋଗକ, ସ୍ୱଚ୍ଛତା, ସୁରକ୍ଷା ଏବଂ ଦୀର୍ଘକାଳୀନ ସହ ପିଲାଙ୍କ ସ୍ୱାସ୍ଥ୍ୟରେ ଉନ୍ନତି ଏବଂ ସକାରାତ୍ମକ ଆଚରଣକୁ ପ୍ରଦାନ କରିଥାଏ।

ନିମ୍ନୋକ୍ତ କାର୍ଯ୍ୟରୁ ଅଙ୍ଗନବାଡ଼ି କେନ୍ଦ୍ରର କାର୍ଯ୍ୟ କେଉଁଟି?

- A. ରୋଗପ୍ରତିରୋଧକତା ପ୍ରଦାନ କରିବା
- B. ପରିପୁରକ ପୋଷକ
- C. ନନ୍-ଫର୍ମାଲ ପୁର୍ବ ବିଶ୍ୱବିଦ୍ୟାଳୟ ପାଠପଢ଼ା
- D. ବିଦ୍ୟାଳୟ ପରେ ପିଲାକୁ ଶୁଦ୍ଧକାର୍ଯ୍ୟ ପାଇଁ ସାହାଯ୍ୟ କରିବା

ନିମ୍ନଲିଖିତ ବିକଳ୍ପ ମଧ୍ୟରୁ ଯଦିକି ତତ୍ତ୍ୱଗତ ଭାବେ:

- 1. କେବଳ B, C ଏବଂ D
- 2. କେବଳ A, B ଏବଂ D
- 3. କେବଳ A, B ଏବଂ C
- 4. କେବଳ A, D ଏବଂ C

Options :

- 485584146305. 1
- 485584146306. 2
- 485584146307. 3
- 485584146308. 4

Question Number : 193 Question Id : 48558436578 Question Type : MCQ Option Shuffling : No Is Question Mandatory : No Calculator : None Response Time : N.A Think Time : N.A Minimum Instruction Time : 0

Correct Marks : 5 Wrong Marks : 1

Question Key Details :

Key	Value
Comprehension	Comp1

Read the passage carefully. Attempt Question

Anganwadi Centers (AWCs) are the most common and publicly available facilities, initially constituted in 1975 to strengthen the public health system by providing immunization and health check-ups, and later to provide supplementary nutrition non-formal pre-school education and day-care.

The two key elements of early childhood development include education and health. A child's early years (0 to 8 years) form the foundation of all learning and are therefore the most extraordinary period of development in a child's life. Research has shown that greater cognitive abilities and being developmentally on track with literacy and numeracy in childhood provide for better learning in school and higher educational attainment, leading to major social and economic gains for society in the long run. Similarly, providing children with a nurturing environment in early years, with adequate nutrition, hygiene, protection and responsive stimulation, boosts healthy childhood development and delivers positive outcomes.

The two key elements of early childhood development are _____

1. Nutrition and immunisation
2. Health and education
3. School readiness and health
4. Day care and creche

Options :

485584146309. 1
485584146310. 2
485584146311. 3
485584146312. 4

Question Number : 193 Question Id : 48558436578 Question Type : MCQ Option Shuffling : No Is Question Mandatory : No Calculator : None Response Time : N.A Think Time : N.A Minimum Instruction Time : 0

Correct Marks : 5 Wrong Marks : 1

Question Key Details :

Key	Value
Comprehension	Comp1

ଅଙ୍ଗନବାଡ଼ି (AWC) ଗୋଟିଏ ବହୁତ ସାଧାରଣ ଏବଂ ସମାଜରେ ମିଳୁଥିବା ସୁବିଧା ଏଥିରେ ଅନ୍ତର୍ଭୁକ୍ତ। ଏହା 1975 ମସିହାରେ ସୃଷ୍ଟି କାର୍ଯ୍ୟକାରୀ ହୋଇଥିଲା ଯାହାକି ସମାଜର ସ୍ୱାସ୍ଥ୍ୟ ବ୍ୟବସ୍ଥା କୁ ଉନ୍ନତ କରିବାକୁ ଲୋକଙ୍କୁ ରୋଗ ପ୍ରତିରୋଧକତା ଏବଂ ସ୍ୱାସ୍ଥ୍ୟ ପରୀକ୍ଷା ଚର୍ଚ୍ଚା ସହିତ ପୋଷକତା ଏବଂ ନନ୍-ଫର୍ମାଲ୍ ପୂର୍ବ ବିଦ୍ୟାଳୟ ପାଠ ପଢ଼ା ପ୍ରଦାନ କରିଥାଏ।

ଶୀଘ୍ର ଶିଶୁ ଜନ୍ମରେ ଦୁଇଟି ମୁଖ୍ୟ ଚାକିରି ଉପାଦାନ ରହିଛି ଯେ ଦୁଇଟି ଶିକ୍ଷା ଏବଂ ସ୍ୱାସ୍ଥ୍ୟ। ଶିଶୁର ଅଳ୍ପ ବୟସ (0-8 ବର୍ଷ), ଶିକ୍ଷାଗତ ମୂଳଦୁଆ ଏବଂ ଏଠାରେ ଶିଶୁର ଅତି ଅବିଶ୍ୱାସନୀୟ ପରିବର୍ତ୍ତନ ଦେଖାଯାଇଥାଏ। ଗବେଷଣାକାରୀମାନେ ଦେଖିଲେ ବହୁତ ଅଧିକା ବୈଦିକ ଗୁଣ ଏବଂ ଶିଶୁ ସମୟରେ ଭାଷାଗତ ଏବଂ ସଂଖ୍ୟାଗତ ଗୁଣକୁ ବିଦ୍ୟାଳୟରେ ଭଲ ପାଠପଢ଼ା ପାଇଁ ଏବଂ ଭଲ ଶିକ୍ଷାଗତ ପ୍ରାପ୍ତି ପ୍ରଦାନ କରିଥାଏ। ଏହା ଅଧିକ ସମାଜ ପାଇଁ ଅଧିକ ଜ୍ଞାନ ବ୍ୟାପି ଯାମାନିକତା ଏବଂ ଅର୍ଥ ନୈତିକତା ସୃଷ୍ଟି କରେ। ସମାଜର ଛୋଟ ସମୟରେ ପିଲାଙ୍କୁ ଭରଣପୋଷଣର ପରିବେଶ ପ୍ରଦାନ କରେ। ଯାହାକି ପୋଷକ, ସହଜ, ସୁରକ୍ଷା ଏବଂ ବାସ୍ତବିକତା ସହ ପିଲାଙ୍କ ସ୍ୱାସ୍ଥ୍ୟରେ ଉନ୍ନତି ଏବଂ ସକାରାତ୍ମକ ଆଚରଣକୁ ପ୍ରଦାନ କରିଥାଏ।

ଶୀଘ୍ର ଶିଶୁ ଜନ୍ମରେ କେଉଁଟି ଦୁଇଟି ଚାକିରି ଉପାଦାନ ଅଟେ।

1. ପୋଷକତା ଏବଂ ରୋଗପ୍ରତିରୋଧକତା
2. ସ୍ୱାସ୍ଥ୍ୟ ଏବଂ ଶିକ୍ଷା
3. ବିଦ୍ୟାଳୟ ପ୍ରଭୃତିକରଣ ଏବଂ ଶିକ୍ଷା
4. ଦିନ ଯତ୍ନ ଏବଂ ଶିଶୁ ଯତ୍ନ କେନ୍ଦ୍ର

Options :

485584146309. 1
485584146310. 2

485584146311. 3

485584146312. 4

Question Number : 194 Question Id : 48558436579 Question Type : MCQ Option Shuffling : No Is Question Mandatory : No Calculator : None Response Time : N.A Think Time : N.A Minimum Instruction Time : 0

Correct Marks : 5 Wrong Marks : 1

Question Key Details :

Key	Value
Comprehension	Comp1

Read the passage carefully. Attempt Question

Anganwadi Centers (AWCs) are the most common and publicly available facilities, initially constituted in 1975 to strengthen the public health system by providing immunization and health check-ups, and later to provide supplementary nutrition non-formal pre-school education and day-care.

The two key elements of early childhood development include education and health. A child's early years (0 to 8 years) form the foundation of all learning and are therefore the most extraordinary period of development in a child's life. Research has shown that greater cognitive abilities and being developmentally on track with literacy and numeracy in childhood provide for better learning in school and higher educational attainment, leading to major social and economic gains for society in the long run. Similarly, providing children with a nurturing environment in early years, with adequate nutrition, hygiene, protection and responsive stimulation, boosts healthy childhood development and delivers positive outcomes.

The period of laying the foundation of all learning and rapid development during early childhood development is _____.

1. 3 to 6 years
2. 0 to 8 years
3. 1 to 2 years
4. 0 to 2 years

Options :

485584146313. 1

485584146314. 2

485584146315. 3

485584146316. 4

Question Number : 194 Question Id : 48558436579 Question Type : MCQ Option Shuffling : No Is Question Mandatory : No Calculator : None Response Time : N.A Think Time : N.A Minimum Instruction Time : 0

Correct Marks : 5 Wrong Marks : 1

Question Key Details :

Key	Value
Comprehension	Comp1

ଅଙ୍ଗନବାଡ଼ି (AWC) ଗୋଟିଏ ବହୁତ ସାଧାରଣ ଏବଂ ସମାଜରେ ମିଳୁଥିବା ସୁବିଧା ଏଥିରେ ଅନ୍ତର୍ଭୁକ୍ତ। ଏହା 1975 ମସିହାରେ ସୃଷ୍ଟି କାର୍ଯ୍ୟକାରୀ ହୋଇଥିଲା ଯାହାକି ସମାଜର ସ୍ୱାସ୍ଥ୍ୟ ବ୍ୟବସ୍ଥା କୁ ଉନ୍ନତ କରିବାକୁ ଲକ୍ଷ୍ୟ ରଖିବାକୁ ଗୋଟିଏ ପ୍ରତିରୋଧକ ଏବଂ ସ୍ୱାସ୍ଥ୍ୟ ପରୀକ୍ଷା କରୁଥିବା ପୋଷକ ଏବଂ ନିର୍ଦ୍ଦେଶାଳୁ ପୂର୍ଣ୍ଣ ବିଦ୍ୟାର୍ଥୀ ପାଠ ପଢ଼ା ପ୍ରଦାନ କରିଥାଏ।

ଶାନ୍ତ ଶିଶୁ ଉନ୍ନତିରେ ଦୁଇଟି ମୁଖ୍ୟ ଚାରି ଉପାଦାନ ରହିଛି ଯେ ଦୁଇଟି ଶିକ୍ଷା ଏବଂ ସ୍ୱାସ୍ଥ୍ୟ ଶିଶୁର ଅଳ୍ପ ବୟସ (0-8 ବର୍ଷ), ଶିକ୍ଷାଗତ ମୂଲ୍ୟ ଏବଂ ଏଠାରେ ଶିଶୁର ଅତି ଅବିଶ୍ୱାସନୀୟ ପରିବର୍ତ୍ତନ ଦେଖାଯାଇଥାଏ। ଉଦ୍ଦେଶ୍ୟକାରୀମାନେ ଦେଖିଲେ ବହୁତ ଅଧିକ ବୌଦ୍ଧିକ ଗୁଣ ଏବଂ ଶିଶୁ ସମୟରେ ଲାଭାଗତ ଏବଂ ସଂଖ୍ୟାଗତ ସୁଖକୁ ବିଦ୍ୟାର୍ଥୀରେ ଭଲ ପାଠପଢ଼ା ପାଇଁ ଏବଂ ତଳ ଶିକ୍ଷାଗତ ପ୍ରାପ୍ତି ପ୍ରଦାନ କରିଥାଏ। ଏହା ଅଧିକ ସମାଜ ପାଇଁ ଅଧିକ ଜ୍ଞାନ ବ୍ୟାପି ସାମାଜିକତା ଏବଂ ଅର୍ଥ ନୈତିକତା ସୃଷ୍ଟି କରେ। ସମାଜର ହୋଟ ସମୟରେ ପିଲାଙ୍କୁ ଭରଣପୋଷଣର ପରିବେଶ ପ୍ରଦାନ କରେ। ଯାହାକି ପୋଷକ, ସୁରକ୍ଷା, ସୁରକ୍ଷା ଏବଂ ବାସ୍ତବିକତା ସହ ପିଲାଙ୍କ ସ୍ୱାସ୍ଥ୍ୟରେ ଉନ୍ନତି ଏବଂ ସମାଜର ଅନ୍ତର୍ଭୁକ୍ତ ପ୍ରଦାନ କରିଥାଏ।

କ୍ଷୀର ଉତ୍ପାଦନ କେଉଁଠାରେ (ଶାନ୍ତ ଶିଶୁ ବିକାଶ) _____ ସମୟରେ ଶିଶୁର ଶିକ୍ଷା ମୂଲ୍ୟ ଏବଂ ଶାନ୍ତ ଉନ୍ନତି ହୋଇଥାଏ।

1. 3 ରୁ 6 ବର୍ଷ
2. 0 ରୁ 8 ବର୍ଷ
3. 1 ରୁ 2 ବର୍ଷ
4. 0 ରୁ 2 ବର୍ଷ

Options :

- 485584146313. 1
- 485584146314. 2
- 485584146315. 3
- 485584146316. 4

Question Number : 195 Question Id : 48558436580 Question Type : MCQ Option Shuffling : No Is Question Mandatory : No Calculator : None Response Time : N.A Think Time : N.A Minimum Instruction Time : 0

Correct Marks : 5 Wrong Marks : 1

Question Key Details :

Key	Value
Comprehension	Comp1

Read the passage carefully. Attempt Question

Anganwadi Centers (AWCs) are the most common and publicly available facilities, initially constituted in 1975 to strengthen the public health system by providing immunization and health check-ups, and later to provide supplementary nutrition non-formal pre-school education and day-care.

The two key elements of early childhood development include education and health. A child's early years (0 to 8 years) form the foundation of all learning and are therefore the most extraordinary period of development in a child's life. Research has shown that greater cognitive abilities and being developmentally on track with literacy and numeracy in childhood provide for better learning in school and higher educational attainment, leading to major social and economic gains for society in the long run. Similarly, providing children with a nurturing environment in early years, with adequate nutrition, hygiene, protection and responsive stimulation, boosts healthy childhood development and delivers positive outcomes.

To boost healthy childhood and getting positive outcomes in ECCE, which of the following needs to be provided?

- A. Adequate nutrition
- B. Responsive stimulation
- C. Hygiene
- D. Toys and games
- E. Immunisation

Choose the correct answer from the options given below:

- 1. A, B and C only
- 2. A, B and D only
- 3. B, C and D only
- 4. C, D and E only

Options :

- 485584146317. 1
- 485584146318. 2
- 485584146319. 3
- 485584146320. 4

Question Number : 195 Question Id : 48558436580 Question Type : MCQ Option Shuffling : No Is Question Mandatory : No Calculator : None Response Time : N.A Think Time : N.A Minimum Instruction Time : 0

Correct Marks : 5 Wrong Marks : 1

Question Key Details :

Key	Value
Comprehension	Comp1

ଅଙ୍ଗନବାଡ଼ି (AWC) ଗୋଟିଏ ସହୁତ ସାଧାରଣ ଏବଂ ସମାଜରେ ମିଳୁଥିବା ସୁବିଧା ଏଥିରେ ଅନ୍ତର୍ଭୁକ୍ତ। ଏହା 1975 ମସିହାରେ ସୃଷ୍ଟି କାର୍ଯ୍ୟକାରୀ ହୋଇଥିଲା ଯାହାକି ସମାଜର ସ୍ୱାସ୍ଥ୍ୟ ବ୍ୟବସ୍ଥା କୁ ଉନ୍ନତ କରିବାକୁ ଲୋକଙ୍କୁ ରୋଗ ପ୍ରତିରୋଧକ ଏବଂ ସ୍ୱାସ୍ଥ୍ୟ ପରୀକ୍ଷା ଚଳୁ ଅଛିତ ପୋଷକ ଏବଂ ନନ୍-ପର୍ମାଲ୍ ପୂର୍ତ୍ତ ବିଦ୍ୟାଳୟ ପାଠ ପଢ଼ା ପ୍ରଦାନ କରିଥାଏ।

ଶାସ୍ତ୍ର ଶିଶୁ ଜନ୍ମରେ ଦୁଇଟି ମୁଖ୍ୟ ଚାରି ଉପାଦାନ ରହିଛି ଯେ ଦୁଇଟି ଶିକ୍ଷା ଏବଂ ସ୍ୱାସ୍ଥ୍ୟ ଶିଶୁର ଅଳ୍ପ ବୟସ (0-8 ବର୍ଷ), ଶିକ୍ଷାଗତ ମୂଲ୍ୟ ଏବଂ ଏଠାରେ ଶିଶୁର ଅତି ଅବିଶ୍ୱାସନୀୟ ପରିବର୍ତ୍ତନ ଦେଖାଯାଇଥାଏ। ଉଦ୍ଦେଶ୍ୟକାରୀମାନେ ଦେଖିଲେ ସହୁତ ଅଧିକ ବୌଦ୍ଧିକ ଗୁଣ ଏବଂ ଶିଶୁ ସମୟରେ ଲାଭାଗତ ଏବଂ ସଂଖ୍ୟାଗତ ସୁଖକୁ ବିଦ୍ୟାଳୟରେ ଭଲ ପାଠପଢ଼ା ପାଇଁ ଏବଂ ତଳ ଶିକ୍ଷାଗତ ପ୍ରାପ୍ତି ପ୍ରଦାନ କରିଥାଏ। ଏହା ଅଧିକ ସମାଜ ପାଇଁ ଅଧିକ ଜ୍ଞାନ ବ୍ୟାପି ଯାମାନିକତା ଏବଂ ଅର୍ଥ ନୈତିକତା ସୃଷ୍ଟି କରେ। ସମାଜର ଛୋଟ ସମୟରେ ପିଲାଙ୍କୁ ଭରଣପୋଷଣର ପରିବେଶ ପ୍ରଦାନ କରେ। ଯାହାକି ପୋଷକ, ସହଜ, ସୁରକ୍ଷା ଏବଂ ଦାୟିତ୍ୱବୋଧତା ସହ ପିଲାଙ୍କ ସ୍ୱାସ୍ଥ୍ୟରେ ଭଲଟି ଏବଂ ସଜାଗତର ଆକର୍ଷକ ପ୍ରଦାନ କରିଥାଏ।

ଶିଶୁର ସ୍ୱାସ୍ଥ୍ୟକୁ ଭଲଟି କରିବା ଏବଂ ECCE ରେ ସକାରାତ୍ମକ ଆକର୍ଷକ ପାଇବା ପାଇଁ ନିମ୍ନୋକ୍ତ କେଉଁଟି ପ୍ରଦାନ କରାଯାଏ?

- A. ପଠିତ୍ ପୋଷଣ
- B. ପ୍ରତିକ୍ରିୟାକର୍ମିତ ଉପପନ୍ନ
- C. ସୁହଜତା
- D. ଶେରନା ଏବଂ ଶେର
- E. ରୋଗପ୍ରତିରୋଧକତା

ନିମ୍ନଲିଖିତ ବିକଳ୍ପ ମଧ୍ୟରୁ ସଠିକ୍ ଉତ୍ତରଟି ଚାଛନ୍ତୁ:

- 1. କେବଳ A, B ଏବଂ C
- 2. କେବଳ A, B ଏବଂ D
- 3. କେବଳ B, C ଏବଂ D
- 4. କେବଳ C, D ଏବଂ E

Options :

- 485584146317. 1
- 485584146318. 2
- 485584146319. 3
- 485584146320. 4

Sub-Section Number : 3
Sub-Section Id : 4855842701
Question Shuffling Allowed : No
Is Section Default? : null

Question Number : 196 **Question Id :** 48558436581 **Question Type :** MCQ **Option Shuffling :** No **Is Question Mandatory :** No **Calculator :** None **Response Time :** N.A **Think Time :** N.A **Minimum Instruction Time :** 0

Correct Marks : 5 **Wrong Marks :** 1

Question Key Details :

Key	Value
Comprehension	Comp2

Read the passage carefully. Attempt Question

Consumers not only purchase products but a whole gamut of services like those of banks, other financial institutions, airlines and travel agencies; hospitals and other medical practitioners; public utilities like garbage collection, cleanliness and maintenance of roads, parks, etc; electricity water telephone, post and telegraph; educational institutions and so on.

Consumers face a number of problems with regard to these services like excessive billing, being charged but not delivering the service, gap between promised level of service and service that is delivered, overstating the service attributes and enticing the consumer, making false claims and so on.

Gap between service delivery and external communication is a consumer issue. Consumer expectations are affected by promises made by the service provider in his external communication which may be through brochures, advertisements, personal selling etc. E.g. If a resort hotel brochure shows a beautiful room but the guests arrive and find the room to be cheap and very ordinary. Many a times people make advance bookings based on the brochures or seeing the website or some other advertisements. In such bookings sometimes advance also has to be paid. If the customer does not like the room ambience he may be left with little choice since refunds are not given by many hotels.

Many private educational institutions assure jobs to students after completion of course which eventually does not happen. Which service-related consumer problem is depicted in this example ?

1. Excessive billings
2. Being charged but not delivering the service
3. Making false claims
4. Overstating the service attributes

Options :

- 485584146321. 1
- 485584146322. 2
- 485584146323. 3
- 485584146324. 4

Question Number : 196 Question Id : 48558436581 Question Type : MCQ Option Shuffling : No Is Question Mandatory : No Calculator : None Response Time : N.A Think Time : N.A Minimum Instruction Time : 0

Correct Marks : 5 Wrong Marks : 1

Question Key Details :

Key	Value
Comprehension	Comp2

ଆଇବି ମାନେ କେବଳ ଉପାଦାନ ନିଶ୍ଚିତ ନାହିଁ ବରଂ ସମସ୍ତ ସେବା ଯେପରି ବ୍ୟାଙ୍କ, ପ୍ରାନ୍ତ ଆର୍ଥିକ ସଂସ୍ଥା, ବିମାନ ଗୁପ୍ତ ଓ ପରିବହନ ମାଧ୍ୟମ, ବାହରଖାନା ଓ ଅନ୍ୟ ସ୍ୱାସ୍ଥ୍ୟ ଅନୁଷ୍ଠାନଗୁଡ଼ା, ମତ୍ତକା ସଂଗ୍ରହକାରୀ ଠାକୁର ଉପାଦେୟତା, ଗାଈ ସମାପ୍ତ ସ୍ତୁରୀ ଓ ପରିଗଣନା, ପାକ ଉତ୍ପାଦି, ବିଦ୍ୟୁତ୍ ଓ ଉତ୍ପାଦନ, ବାକ ଓ ଚେନିପ୍ରାପ୍ତ, ଶିକ୍ଷାନୁଷ୍ଠାନ କର୍ତ୍ତୃକ ଉତ୍ପାଦି.....

ଆଇବି ବିଭିନ୍ନ ସମସ୍ୟାର ସମ୍ମୁଖୀନ ହୁଏ ଯେପରିକି ଏହି ସବୁ ସେବା ପରି ଅଭ୍ୟୁତ୍ପାଦନ ବିଳ, ଚାର୍ଜ ସେବା ନିଷ୍ପତ୍ତି ସେବା ନିବୃତ୍ତ ରହିବା, ପ୍ରତିଷ୍ଠା ସ୍ତର ସେବାରେ ବ୍ୟବଧାନ, ସେବା ପାଇଁ ବିପାଦୀୟ, ଅଭ୍ୟୁତ୍ପାଦନ ଶିଳା ଦୁର୍ଭାବ ସେବା ଓ ଆଇବିକୁ ଆକର୍ଷିତ କରିବା, ମିଥ୍ୟାବାଦୀ କରିବା ଉତ୍ପାଦି.....

ସେବା ପାଇବା ଓ ବାଧ୍ୟ ସେବାଯୋଗ୍ୟ ର ଉପକ୍ରମ ସେବା ଆଇବି ସମସ୍ୟା। ସେବା ସେବାକାରୀଙ୍କ ର ବାଧ୍ୟ ସେବାଯୋଗ୍ୟ କ୍ରମରେ ଆଇବିର ଅଭାବ କରାଯାଏ ପ୍ରାୟତଃ ହୁଏ ଯେପରି ବାହରଖ, ବିଜ୍ଞାନ, ବ୍ୟକ୍ତିଗତ ବିକାଶ କର୍ତ୍ତୃକ ମାଧ୍ୟମରେ ଉପାଦେୟତା ସ୍ୱରୂପ, ଉତ୍ପାଦି ବିକାଶ କ୍ଷେତ୍ରରେ ଯେଉଁପରି ଆଇବିର ବ୍ୟବଧାନ ନ ଥାଏ, ଯାହା ଅନିଷ୍ଟ, ଶକ୍ତ ଓ ସାଧାରଣ ମଙ୍ଗଳ ହୋଇଥାଏ। ବିଷ୍ଣୁ ସମୟରେ ଉପକ୍ରମରେ ଉପକ୍ରମ ଓ ଚଳି ଚଳାପନ, ବ୍ୟବହାର ଦେଖି ପ୍ରକାଶ ଅସ୍ଥାୟୀ ହୁଏ କରାଯାଏ ଏହା ବାବଦକୁ ଅଗ୍ରାଣ ଅର୍ଥ ଯେଠି କରାଯାଏ ଯଦି ବିକାଶକୁ ପ୍ରକାଶ ବିଳ ରାରେ ନାହିଁ, ଯେବେ ପ୍ରକାଶ ଶାନ୍ତି ଅନୁପ୍ରାପ୍ତ ହାରିଲେ ସେହି ଅର୍ଥ ଆଇବି ଯେତେ ହୁଏ ନାହିଁ।

ବହୁତ ଉପକ୍ରମ ଶିକ୍ଷାନୁଷ୍ଠାନ ହାତୁହାତୁ ମାନକୁ ପାଠପଢ଼ି ସାରିଲା ପରେ ବାକିରା ସେବାର ଆବ୍ୟାସନା ବିଅତି କିନ୍ତୁ ପ୍ରାୟତଃ ତାହା ହୁଏ ନାହିଁ। ଏହା ଆଇବି ମାନଙ୍କ ପାଇଁ କେଉଁ ପ୍ରକାର ସମସ୍ୟା ଏହି ଜବାହରଣ ଉପରେ କୁହା

1. ଅଭ୍ୟୁତ୍ପାଦନ ବିଳି*
2. ଚାର୍ଜ ସେବାକୁ ପଡ଼େ କିନ୍ତୁ ସେବା ଉପକ୍ରମ ହୁଏ ନାହିଁ
3. ମିଥ୍ୟା ବାଦୀ କରିବା
4. ସେବା ସ୍ତରରେ ଅଭ୍ୟୁତ୍ପାଦନ ଶିଳା ହେବା

Options :

- 485584146321. 1
- 485584146322. 2
- 485584146323. 3
- 485584146324. 4

Question Number : 197 Question Id : 48558436582 Question Type : MCQ Option Shuffling : No Is Question Mandatory : No Calculator : None Response Time : N.A Think Time : N.A Minimum Instruction Time : 0

Correct Marks : 5 Wrong Marks : 1

Question Key Details :

Key	Value
Comprehension	Comp2

Read the passage carefully. Attempt Question

Consumers not only purchase products but a whole gamut of services like those of banks, other financial institutions, airlines and travel agencies; hospitals and other medical practitioners; public utilities like garbage collection, cleanliness and maintenance of roads, parks, etc; electricity water telephone, post and telegraph; educational institutions and so on.

Consumers face a number of problems with regard to these services like excessive billing, being charged but not delivering the service, gap between promised level of service and service that is delivered, overstating the service attributes and enticing the consumer, making false claims and so on.

Gap between service delivery and external communication is a consumer issue. Consumer expectations are affected by promises made by the service provider in his external communication which may be through brochures, advertisements, personal selling etc. E.g. If a resort hotel brochure shows a beautiful room but the guests arrive and find the room to be cheap and very ordinary. Many a times people make advance bookings based on the brochures or seeing the website or some other advertisements. In such bookings sometimes advance also has to be paid. If the customer does not like the room ambience he may be left with little choice since refunds are not given by many hotels.

Which of the following is NOT an example of services offered to consumers ?

- 1. Consumer durables
- 2. Banking services
- 3. Airlines
- 4. Educational institutions

Options :

- 485584146325. 1
- 485584146326. 2
- 485584146327. 3
- 485584146328. 4

Question Number : 197 Question Id : 48558436582 Question Type : MCQ Option Shuffling : No Is Question Mandatory : No Calculator : None Response Time : N.A Think Time : N.A Minimum Instruction Time : 0

Correct Marks : 5 Wrong Marks : 1

Question Key Details :

Key	Value
Comprehension	Comp2

ଆଜିକାଲି ମାନବ କ୍ଷେତ୍ରର ଉତ୍ପାଦ ନିର୍ମିତ କାର୍ଯ୍ୟ କରା ଯାଏନା ସେବା ଯେଉଁଠି ବ୍ୟାଙ୍କ, ପ୍ରାଥମିକ ସ୍କୁଲ, ବିମାନ ଗୃହ ଓ ପରିବହନ ମାଧ୍ୟମ, ବ୍ୟାଞ୍ଜନାଳୟ ଓ ଅନ୍ୟ ସ୍ଥାନୀୟ ଅନୁଷ୍ଠାନଗୁଡ଼ା, ମହତ୍ତ୍ୱପୂର୍ଣ୍ଣ ଭୂମିକା ଉପରେ ଉପାଦେୟତା, ଗାନ୍ଧୀ ସମାଜ ସ୍ମୃତି ଓ ପରିଚାଳନା, ପାକ ଉତ୍ପାଦ, ବିଦ୍ୟୁତ୍ ଓ ଜଳ ପୁରାଇ, ବ୍ୟାଞ୍ଜନାଳୟ ଓ ଅନ୍ୟ ଅନୁଷ୍ଠାନ ଉପରେ କରାଯାଏ।

ଆଜିକାଲି ବିଭିନ୍ନ ସମସ୍ୟାର ସମ୍ପୂର୍ଣ୍ଣ ସମାଧାନ ଦେବା ପାଇଁ ଉପାଦେୟତା, ଗାନ୍ଧୀ ସମାଜ ସ୍ମୃତି ଓ ପରିଚାଳନା, ପାକ ଉତ୍ପାଦ, ବିଦ୍ୟୁତ୍ ଓ ଜଳ ପୁରାଇ, ବ୍ୟାଞ୍ଜନାଳୟ ଓ ଅନ୍ୟ ଅନୁଷ୍ଠାନ ଉପରେ କରାଯାଏ।

ସେବା ପ୍ରଦାନ ଓ ବ୍ୟାଞ୍ଜନାଳୟ ଉପରେ ଉପାଦେୟତା ଓ ଗାନ୍ଧୀ ସମାଜ ସ୍ମୃତି ଓ ପରିଚାଳନା, ପାକ ଉତ୍ପାଦ, ବିଦ୍ୟୁତ୍ ଓ ଜଳ ପୁରାଇ, ବ୍ୟାଞ୍ଜନାଳୟ ଓ ଅନ୍ୟ ଅନୁଷ୍ଠାନ ଉପରେ କରାଯାଏ। ସେବା ପ୍ରଦାନ ଓ ବ୍ୟାଞ୍ଜନାଳୟ ଉପରେ ଉପାଦେୟତା ଓ ଗାନ୍ଧୀ ସମାଜ ସ୍ମୃତି ଓ ପରିଚାଳନା, ପାକ ଉତ୍ପାଦ, ବିଦ୍ୟୁତ୍ ଓ ଜଳ ପୁରାଇ, ବ୍ୟାଞ୍ଜନାଳୟ ଓ ଅନ୍ୟ ଅନୁଷ୍ଠାନ ଉପରେ କରାଯାଏ।

ନିମ୍ନୋକ୍ତ କେଉଁଟି ଉପଭୋକ୍ତାଙ୍କୁ ପ୍ରଦାନ କରାଯାଇଥିବା ସେବା ନୁହେଁ?

1. ଉପଭୋକ୍ତା ସାମଗ୍ରୀ
2. ଭୁଲ୍ ସେବା
3. ବିମାନ ସେବା
4. ଶିକ୍ଷା ଅନୁଷ୍ଠାନ

Options :

485584146325. 1
485584146326. 2
485584146327. 3
485584146328. 4

Question Number : 198 Question Id : 48558436583 Question Type : MCQ Option Shuffling : No Is Question Mandatory : No Calculator : None Response Time : N.A Think Time : N.A Minimum Instruction Time : 0

Correct Marks : 5 Wrong Marks : 1

Question Key Details :

Key	Value
Comprehension	Comp2

Read the passage carefully. Attempt Question

Consumers not only purchase products but a whole gamut of services like those of banks, other financial institutions, airlines and travel agencies; hospitals and other medical practitioners; public utilities like garbage collection, cleanliness and maintenance of roads, parks, etc; electricity water telephone, post and telegraph; educational institutions and so on.

Consumers face a number of problems with regard to these services like excessive billing, being charged but not delivering the service, gap between promised level of service and service that is delivered, overstating the service attributes and enticing the consumer, making false claims and so on.

Gap between service delivery and external communication is a consumer issue. Consumer expectations are affected by promises made by the service provider in his external communication which may be through brochures, advertisements, personal selling etc. E.g. If a resort hotel brochure shows a beautiful room but the guests arrive and find the room to be cheap and very ordinary. Many a times people make advance bookings based on the brochures or seeing the website or some other advertisements. In such bookings sometimes advance also has to be paid. If the customer does not like the room ambience he may be left with little choice since refunds are not given by many hotels.

Many a times, we are required to pay a basic telephone rental charge irrespective of it being out of order.
Which service related to consumer problem is depicted in this example?

1. Excessive billing
2. Being charged but not delivering the service
3. Making false claims
4. Overstating the service attributes

Options :

- 485584146329. 1
- 485584146330. 2
- 485584146331. 3
- 485584146332. 4

Question Number : 198 Question Id : 48558436583 Question Type : MCQ Option Shuffling : No Is Question Mandatory : No Calculator : None Response Time : N.A Think Time : N.A Minimum Instruction Time : 0

Correct Marks : 5 Wrong Marks : 1

Question Key Details :

Key	Value
Comprehension	Comp2

ଆଜିକାଲି ମନେ କେବଳ ଉପାଦାନ କିଣିବା ନାହିଁ ବରଂ ସମସ୍ତ ସେବା ଯେପରି ବ୍ୟାଙ୍କ, ପ୍ରାଥମିକ ସ୍କୁଲ, ବିମାନ ଗୁଡ଼ିକ ଓ ପବ୍ଲିକ୍ ସେକ୍ଟର ମାଧ୍ୟମ, ବାହାରିବା ଓ ଅନ୍ୟ ବ୍ୟାଙ୍କ ଅନୁସାରେ, ମହଙ୍ଗା ସଂଗ୍ରହକାରୀ ପରି ଜନ ଉପାଦେୟତା, ଗାନ୍ଧୀ ସମାଜ ସୁରକ୍ଷା ଓ ପରିଚାଳନା, ପାର୍ଲିମେଣ୍ଟ, ବିଦ୍ୟୁତ୍ ବିକ୍ରୟ କରୁଥିବା, ବୁକ୍ ଓ ଟେଲିଗ୍ରାଫ୍, ବିଭାଗୀୟ କର୍ମଚାରୀ ଇତ୍ୟାଦି କରାଯାଏ।

ଆଜିକାଲି ବିଭିନ୍ନ ସମସ୍ୟାର ସମ୍ମୁଖୀନ ହୁଏ ଯେପରିକି ଏହି ସବୁ ସେବା ପ୍ରତି ଅଧିକାର ଦିବା, ତାହା ସେବା କିଛି ସେବା ନିବୁଦ୍ଧ କରିବା, ପ୍ରତିଷ୍ଠା ସ୍ତର ସେବାରେ ବ୍ୟବଧାନ, ସେବା ପାଇଁ ଦିଆଯାଏ, ଅଧିକାର କିମ୍ବା ଦୁର୍ଭାଗ୍ୟ କିମ୍ବା ଗୁଣ ଓ ଗାନ୍ଧୀକୁ ପ୍ରାଧିକାର କରିବା, ମିଥ୍ୟାବାଦୀ କରିବା କରାଯାଏ।

ସେବା ପାଇବା ଓ ବାଧ୍ୟ ସେବାପାଇବା ର ଗାନ୍ଧୀୟ ଗାନ୍ଧୀ ସମସ୍ୟା। ସେବା ସେବାକାରୀ ର ବାଧ୍ୟ ସେବାପାଇବା କ୍ରମେ ଆଜିକାଲି ଆଣା କରିବା ପ୍ରାଥମିକ ହୁଏ ଯେପରିକି ବାହାରିବା, ବିଜ୍ଞାନ, ବ୍ୟକ୍ତିଗତ ବିଭିନ୍ନ କରାଯାଏ ମାଧ୍ୟମରେ। ଉପାଦେୟତା ହରୁ, ଗାନ୍ଧୀୟ ବିଭାଗୀୟ କ୍ଷେତ୍ରରେ ଯେଉଁପରି ପ୍ରାଥମିକ ବ୍ୟବଧାନ ନ ଥାଏ, ଯାହା ଅଧିକ, ଅଧିକ ଓ ପାଖାପାଖି ମହଙ୍ଗା କରାଯାଏ। ବିଭିନ୍ନ ସମସ୍ୟାରେ ସେବାକାରୀ ଓ ବିଭିନ୍ନ ବିଭାଗୀୟ, ବାହାରିବା ସେବା ପ୍ରଦାନୀ ଅନୁମତି ଦେବା କରାଯାଏ ଏହା ବାବଦକୁ ଅନୁମତି ଅର୍ଥ ଯେଉଁ କରାଯାଏ। ଯଦି ବିଭାଗୀୟ ପ୍ରଦାନୀ ବିଭିନ୍ନ କରାଯାଏ, ତେବେ ପ୍ରଦାନୀ ଶାନ୍ତି ଅନୁମତି ଗାନ୍ଧୀରେ କେହି ଅଧିକ ଆଜି ଯେତେବେଳେ ହୁଏ ନାହିଁ।

କିନ୍ତୁ ସମସ୍ୟାରେ, ଆମେ ମୁକ୍ତ ଯୋଗ୍ୟ ବ୍ୟବହାର କରା ଦେଖିବାରେ ଯେତେବେଳେ ଏହା କାର୍ଯ୍ୟ କରିନଥାଏ। ଏହି ସମସ୍ୟା ପାଇଁ କେଉଁ କପଲୋଭା ସମସ୍ୟା କି ଦେଖାଯାଉଥାଏ।

1. ଅଧିକ ବିଭା
2. କରା ତାହା ହୋଇଛି କିନ୍ତୁ ସେବା ସେବାପାଇବା ନାହିଁ
3. ମିଛ ବାବଦ କରାଯାଏ
4. ସେବାର ଅଧିକତା ପ୍ରଦାନ କରିବା

Options :

- 485584146329. 1
- 485584146330. 2
- 485584146331. 3
- 485584146332. 4

Question Number : 199 Question Id : 48558436584 Question Type : MCQ Option Shuffling : No Is Question Mandatory : No Calculator : None Response Time : N.A Think Time : N.A Minimum Instruction Time : 0
Correct Marks : 5 Wrong Marks : 1

Question Key Details :

Key	Value
Comprehension	Comp2

Read the passage carefully. Attempt Question

Consumers not only purchase products but a whole gamut of services like those of banks, other financial institutions, airlines and travel agencies; hospitals and other medical practitioners; public utilities like garbage collection, cleanliness and maintenance of roads, parks, etc; electricity water telephone, post and telegraph; educational institutions and so on.

Consumers face a number of problems with regard to these services like excessive billing, being charged but not delivering the service, gap between promised level of service and service that is delivered, overstating the service attributes and enticing the consumer, making false claims and so on.

Gap between service delivery and external communication is a consumer issue. Consumer expectations are affected by promises made by the service provider in his external communication which may be through brochures, advertisements, personal selling etc. E.g. If a resort hotel brochure shows a beautiful room but the guests arrive and find the room to be cheap and very ordinary. Many a times people make advance bookings based on the brochures or seeing the website or some other advertisements. In such bookings sometimes advance also has to be paid. If the customer does not like the room ambience he may be left with little choice since refunds are not given by many hotels.

Which of the following is NOT an example of aid used by service providers for external communication ?

1. Brochures
2. Board meeting
3. Advertisements
4. Personal selling

Options :

- 485584146333. 1
- 485584146334. 2
- 485584146335. 3
- 485584146336. 4

Question Number : 199 Question Id : 48558436584 Question Type : MCQ Option Shuffling : No Is Question Mandatory : No Calculator : None Response Time : N.A Think Time : N.A Minimum Instruction Time : 0
Correct Marks : 5 Wrong Marks : 1

Question Key Details :

Key	Value
Comprehension	Comp2

ଆଜିକାଲି ମାନବ କେବଳ ଉତ୍ପାଦ ନିଶ୍ଚିତ ନାହିଁ ବରଂ ସମସ୍ତ ସେବା ଯୋଗାଇ ଦେବାକୁ, ପ୍ରାଣୀ ଆଧିକାରୀ, ବିମାନ ଗୁପ୍ତ ଓ ପରିବହନ ମାଧ୍ୟମ, ବାହରଖାଇ ଓ ଅନ୍ୟ ସ୍ଥାନୀୟ ଅନ୍ୟାନ୍ୟକାରୀ, ମନୁଷ୍ୟ ସଂସ୍କୃତିକାରୀ ପରି ଜନ ଉପାଦେୟତା, ଗାଈ ସମାପ୍ତ ସ୍ମୃତି ଓ ପରିଚାଳନା, ପାକ ଉତ୍ପାଦି, ବିଦ୍ୟୁତ୍ ଉପରେ ଦୁରାଭାଗ, ବ୍ରାହ୍ମ ଓ ବୈଦିକଗ୍ରାମ, ଶିକ୍ଷାକୁସଳ ଉତ୍ପାଦି ଉତ୍ପାଦି.....

ଆଜିକାଲି ବିଭିନ୍ନ ସମସ୍ୟାର ସମ୍ମୁଖୀନ ହୁଏ ଯେଉଁଥିରେ ଏହି ସବୁ ସେବା ପରି ଅନ୍ୟତମ ବିଳ, ତାହା ସେବା ନିଷ୍ଠା ସେବା ନିବୃତ୍ତ ଉଦ୍ଦେଶ୍ୟ, ପ୍ରତିଷ୍ଠା କ୍ଷମ ସେବାରେ ବ୍ୟବଧାନ, ସେବା ପାଇଁ ବିପାତୀୟ, ଅନ୍ୟତମ ଶିଳା ଦୁର୍ଭାବ ସେବା ଗୁଣ ଓ ଶାନ୍ତିକୁ ଆକର୍ଷିତ କରିବା, ମିତ୍ୟାବାଦୀ କରିବା ଉତ୍ପାଦି.....

ସେବା ପାଇବା ଓ ବାହ୍ୟ ସେବାଯୋଗ ର ଉପକରଣ ସେବା ଆଜିକାଲି ସମସ୍ୟା। ସେବା ସେବାକାରୀର ର ବାହ୍ୟ ସେବାଯୋଗ ଉପରେ ଆଜିକାଲି ଅଧିକା କରାଯାଏ। ପ୍ରାଣୀକୁ ଦୁଃଖ ଯେଉଁ ବାହ୍ୟର, ବିଜ୍ଞାନ, ବ୍ୟକ୍ତିଗତ ବିଭିନ୍ନ ଉତ୍ପାଦି ମାଧ୍ୟମରେ ଉପାଦେୟତା ହରୁତ, ଉତ୍ପାଦି ବିଭିନ୍ନ ଉପାଦେୟତାରେ ଯେଉଁପରି ଆଧୁନିକ ବ୍ୟବଧାନ ନ ଥାଏ, ଯାହା ଅନ୍ୟତମ, ଶିଳା ଓ ସାଧାରଣ ମନୁଷ୍ୟର ହୋଇଥିଲା। ବିଷୟ ସମାପ୍ତରେ ଉପକରଣରେ ଉପକରଣ ଓ ବିଳ ବିଜ୍ଞାନ, ବାହ୍ୟର ଉତ୍ପାଦି ପ୍ରକାରୀ ଅନ୍ୟତମ ଦୁର୍ଭାବ କରାଯାଏ। ଏହା ବାହ୍ୟକୁ ଅନ୍ୟତମ ଅର୍ଥ ଯେଉଁ କରାଯାଏ। ଏହି ବିଷୟକୁ ପ୍ରକାରୀ ବିଳ ଉପରେ ନାହିଁ, ଯେବେ ପ୍ରକାରୀ ଶାନ୍ତି ଅନ୍ୟତମ ଉପକରଣରେ ସେହି ଅର୍ଥ ଆଜି ଉପକରଣ ହୁଏ ନାହିଁ।

ବାହ୍ୟ ସାମାଜିକ ପାଇଁ ନିମୋକ୍ତ କେଉଁ ଉପାଦେୟତା ବ୍ୟବହୃତ ହୁଏ ନାହିଁ?

- A. ବ୍ରାହ୍ମଗତ
- B. ବୋର୍ଡ ନିର୍ଦ୍ଦେଶ
- C. ବିଜ୍ଞାନ
- D. ବ୍ୟକ୍ତିଗତ ବିଳ

ନିମ୍ନଲିଖିତ ବିକଳ ମଧ୍ୟରୁ ଯେଉଁ ଉପକରଣ କାହାକୁ:

- 1. କେବଳ A, C ଏବଂ D
- 2. କେବଳ B, C ଏବଂ D
- 3. କେବଳ B, D ଏବଂ E
- 4. କେବଳ A, B ଏବଂ C

Options :

- 485584146333. 1
- 485584146334. 2
- 485584146335. 3
- 485584146336. 4

Question Number : 200 Question Id : 48558436585 Question Type : MCQ Option Shuffling : No Is Question Mandatory : No Calculator : None Response Time : N.A Think Time : N.A Minimum Instruction Time : 0

Correct Marks : 5 Wrong Marks : 1

Question Key Details :

Key	Value
Comprehension	Comp2

Read the passage carefully. Attempt Question

Consumers not only purchase products but a whole gamut of services like those of banks, other financial institutions, airlines and travel agencies; hospitals and other medical practitioners; public utilities like garbage collection, cleanliness and maintenance of roads, parks, etc; electricity water telephone, post and telegraph; educational institutions and so on.

Consumers face a number of problems with regard to these services like excessive billing, being charged but not delivering the service, gap between promised level of service and service that is delivered, overstating the service attributes and enticing the consumer, making false claims and so on.

Gap between service delivery and external communication is a consumer issue. Consumer expectations are affected by promises made by the service provider in his external communication which may be through brochures, advertisements, personal selling etc. E.g. If a resort hotel brochure shows a beautiful room but the guests arrive and find the room to be cheap and very ordinary. Many a times people make advance bookings based on the brochures or seeing the website or some other advertisements. In such bookings sometimes advance also has to be paid. If the customer does not like the room ambience he may be left with little choice since refunds are not given by many hotels.

A family had gone on vacation for a month but received electricity bill for the same month running in several thousands. Which service related consumer problems is depicted in this case?

1. Excessive billing
2. Being charged but not delivering the service
3. Making false claims
4. Overstating the service attributes

Options :

- 485584146337. 1
- 485584146338. 2
- 485584146339. 3
- 485584146340. 4

Question Number : 200 Question Id : 48558436585 Question Type : MCQ Option Shuffling : No Is Question Mandatory : No Calculator : None Response Time : N.A Think Time : N.A Minimum Instruction Time : 0

Correct Marks : 5 Wrong Marks : 1

Question Key Details :

Key	Value
Comprehension	Comp2

ଆଚାର୍ଯ୍ୟ ମାନେ କେବଳ ଉପାଦାନ ନିଶ୍ଚିତ ନାହିଁ ବରଂ ସମସ୍ତ ସେବା ଯେପରି ବ୍ୟାଜ, ପ୍ରମାଣ ପ୍ରାପ୍ତିକ ବ୍ୟାଜ, ବିମାନ ପୁସ୍ତକ ଓ ପଢ଼ିବହନ ମାଧ୍ୟମ, ବାହରଖାନା ଓ ଅନ୍ୟ ସ୍ଥାପନା ଅନ୍ୟାନ୍ୟକାରୀ, ମହତ୍ତା ସଂଗ୍ରହକାରୀ ପରି ଜନ ଉପାଦେୟତା, ଗାନ୍ଧୀ ସମାଜ ସ୍ମୃତିକା ଓ ପରିଚାଳନା, ପାକ ଉତ୍ପାଦି, କୈଳାଶଚକ୍ର ଶକ୍ତ ଦୁରାଭାଷ, ବ୍ରାହ୍ମ ଓ ଚେନିଗ୍ରାଫ, ଶିଖାଦୁଷ୍ଟାନ ଇତ୍ୟାଦି ଇତ୍ୟାଦି.....

ଆଚାର୍ଯ୍ୟ ବିଭିନ୍ନ ସମସ୍ୟାର ସମ୍ମୁଖୀନ ହୁଏ ଯେପରିକି ଏହି ସବୁ ସେବା ପରି ଅଭ୍ୟୁଦ୍ଧ ବିଲ୍, ତାଙ୍କ ସେବା ନିଷ୍ଠା ସେବା ନିବୃତ୍ତ ରହିବା, ପ୍ରତିଷ୍ଠା ସ୍ତର ସେବାରେ ବ୍ୟବଧାନ, ସେବା ପାଇଁ ବିଆଦାଏ, ସମ୍ପୂର୍ଣ୍ଣ ଶିକ୍ଷା ଦୁର୍ଭାବ ସୂଚୀ ଓ ଶାନ୍ତିକୁ ପ୍ରାକ୍ଷିପ୍ତ କରିବା, ମିଥ୍ୟାବାଦୀ କରିବା ଇତ୍ୟାଦି.....

ସେବା ପାଇବା ଓ ବାହ୍ୟ ସେବାଯୋଗ ର ଗଭୀରତା ଯୋଗ୍ୟ ଆଚାର୍ଯ୍ୟ ସମସ୍ୟା। ସେବା ସେବାକର୍ତ୍ତା ର ବାହ୍ୟ ସେବାଯୋଗ କ୍ରମରେ ଆଚାର୍ଯ୍ୟ ଅଧିକା କରନ୍ତା କରନ୍ତା ପ୍ରଭାବିତ ହୁଏ ଯେପରି ବାହର, ବିଜ୍ଞାନ, ବ୍ୟକ୍ତିଗତ ବିଭିନ୍ନ ଉତ୍ପାଦି ମାଧ୍ୟମରେ ଉପାଦେୟତା ସବୁଦି, ଉଚ୍ଚତମ ବିଶ୍ୱାସୀ ଉପାଦେୟତାରେ ଯେଉଁପରି ପ୍ରାକ୍ଷିପ୍ତକ ବ୍ୟବଧାନ ନ ଥାଏ, ଯାହା ପ୍ରକୃତ, ଶକ୍ତ ଓ ସାଧାରଣ ମଣ୍ଡଳ ହୋଇଥିଲା। ବିଷ୍ଣୁ ସମାଜରେ ପ୍ରୋକ୍ସମାନେ ଉପାଦେୟତା ଓ ବିଲ୍ ବିଜ୍ଞାପନ, ବ୍ୟବହାର ଦେଖି ପ୍ରକୋଷ୍ଟ ଅସ୍ଥାୟୀ ହୁଏ କରନ୍ତା ଏହା ବାବଦକୁ ଅସ୍ଥାୟୀ ଅର୍ଥ ଯେଠି କରନ୍ତା। ଯଦି ବିଶ୍ୱାସକୁ ପ୍ରକୋଷ୍ଟ ବିଲ୍ ରାଗେ ନାହିଁ, ଯେବେ ପ୍ରକୋଷ୍ଟ ଶାନ୍ତି ଅନାମୁ ଚାଲିଲେ ସେହି ଅର୍ଥ ଆତି ଯେତେବେଳେ ହୁଏ ନାହିଁ।

ଯୋଗ୍ୟ ପରିକାର ଛୁଟି କରିବା ପାଇଁ ଏକ ମାସ ବାହାରକୁ ଗଲେ, କିନ୍ତୁ ସେହି ମାସର ବିଦ୍ୟୁତ୍ ବିଲ୍ ଚି ପାଇଲେ ଏବଂ ଏହା ବହୁତ ହଜାର ହୋଇଥିଲା। ଏହି କେସ୍ ରେ କେଉଁ ଉପାଦେୟତା ସମସ୍ୟା ଦେଖାଯିବ?

- 1. ଅଧିକ ବିଲ୍
- 2. ପଇସା ବିଆଦାକରି କିନ୍ତୁ ସେବା ନାହିଁ
- 3. ମିଛ କାଳି
- 4. ସେବାର ଅଧିକତ୍ୱ

Options :

- 485584146337. 1
- 485584146338. 2
- 485584146339. 3
- 485584146340. 4

Teaching Aptitude

Group Number :	6
Group Id :	485584826
Group Maximum Duration :	45
Group Minimum Duration :	45
Show Attended Group? :	No
Edit Attended Group? :	No
Break time :	0
Group Marks :	200
Is this Group for Examiner? :	No
Examiner permission :	Cant View
Show Progress Bar? :	No

Teaching Aptitude

Section Id :	485584950
Section Number :	1
Section type :	Online
Mandatory or Optional :	Mandatory
Number of Questions :	50

Number of Questions to be attempted : 40
Section Marks : 200
Enable Mark as Answered Mark for Review and Clear Response : Yes
Maximum Instruction Time : 0
Sub-Section Number : 1
Sub-Section Id : 4855842702
Question Shuffling Allowed : Yes
Is Section Default? : null

Question Number : 201 Question Id : 48558436586 Question Type : MCQ Option Shuffling : No Is Question Mandatory : No Calculator : None Response Time : N.A Think Time : N.A Minimum Instruction Time : 0

Correct Marks : 5 Wrong Marks : 1

Question Key Details :

Key	Value
Comprehension	MCQ

Match List I with List II

LIST I Dance		LIST II Artists	
A.	Bharatnatyam	I.	Savita Mehta
B.	Odissi	II.	Sitara Devi
C.	Kathak	III.	Yamini Krishnamurthy
D.	Manipuri	IV.	Sanjukta Panigrahi

Choose the correct answer from the options given below:

1. A-III, B-IV, C-II, D-I
2. A-III, B-II, C-IV, D-I
3. A-II, B-IV, C-III, D-I
4. A-II, B-I, C-IV, D-III

Options :

485584146341. 1
485584146342. 2
485584146343. 3
485584146344. 4

Question Number : 201 Question Id : 48558436586 Question Type : MCQ Option Shuffling : No Is Question Mandatory : No Calculator : None Response Time : N.A Think Time : N.A Minimum Instruction Time : 0

Correct Marks : 5 Wrong Marks : 1

Question Key Details :

Key	Value
Comprehension	MCQ

ତାଲିକା I ଅନୁତ ତାଲିକା II ମେଢ କରନ୍ତୁ ।

ତାଲିକା I କରା		ତାଲିକା II ଦୃଷ୍ୟ	
A.	ଉତ୍ତରାଖଣ୍ଡ	I.	ସଦିତା ମେଢତା
B.	ଓଡ଼ିଶା	II.	ସାତାତା ଚେତା
C.	କର୍ଣ୍ଣାଟକ	III.	ଝାମିନୀ ଦୃଷ୍ଟମୂର୍ତ୍ତି
D.	ମଣିପୁରା	IV.	ସଂସୃତା ପାଣିଗ୍ରାହା

ଦିଆଯାଉଥିବା ବିକଳ୍ପରୁ ସଠିକ ଉତ୍ତରଟି ଚାହନ୍ତୁ :

1. A-III, B-IV, C-II, D-I
2. A-III, B-II, C-IV, D-I
3. A-II, B-IV, C-III, D-I
4. A-II, B-I, C-IV, D-III

Options :

485584146341. 1
485584146342. 2
485584146343. 3
485584146344. 4

Question Number : 202 Question Id : 48558436587 Question Type : MCQ Option Shuffling : No Is Question Mandatory : No Calculator : None Response Time : N.A Think Time : N.A Minimum Instruction Time : 0

Correct Marks : 5 Wrong Marks : 1

Question Key Details :

Key	Value
Comprehension	MCQ

DD Gyan Darshan is an educational media initiative of Ministry of Education in collaboration with-

- A. Ministry of Information and Broadcasting
- B. Prasar Bharti
- C. ISRO
- D. IGNOU
- E. Ministry of Information and Communication Technology

Choose the correct answer from the options given below:

1. A, B and C only
2. A, C and D only
3. A, B, C and D only
4. B, C and E only

Options :

485584146345. 1

485584146346. 2
485584146347. 3
485584146348. 4

Question Number : 202 Question Id : 48558436587 Question Type : MCQ Option Shuffling : No Is Question Mandatory : No Calculator : None Response Time : N.A Think Time : N.A Minimum Instruction Time : 0

Correct Marks : 5 Wrong Marks : 1

Question Key Details :

Key	Value
Comprehension	MCQ

ଚିଡ଼ି ଜ୍ଞାନ ଦର୍ଶନ ଏକ ଶିକ୍ଷା ମାଧ୍ୟମ ଯେଉଁଥିରେ ଶିକ୍ଷା ମନ୍ତ୍ରାଳୟର ସହଯୋଗୀ ହୋଇଥାଏ _____ ।

- A. ପୁରୀ ଓ ପ୍ରସାର ମନ୍ତ୍ରାଳୟ
- B. ପ୍ରସାର ଭାରତୀ
- C. ଇସ୍ରୋ (ISRO)
- D. ଇଗ୍ନୋ (IGNOU)
- E. ପୁରୀ ଓ ବୈଜ୍ଞାନିକ ଯୋଗାଯୋଗ

ବିଆପାରୀୟତା ବିକଳ୍ପରୁ ଯଦିକି ତିନିଟି ଉପକ୍ରମ:

- 1. କେବଳ A, B ଓ C
- 2. କେବଳ A, C ଓ D
- 3. କେବଳ A, B, C ଓ D
- 4. କେବଳ B, C ଓ E

Options :

485584146345. 1
485584146346. 2
485584146347. 3
485584146348. 4

Question Number : 203 Question Id : 48558436588 Question Type : MCQ Option Shuffling : No Is Question Mandatory : No Calculator : None Response Time : N.A Think Time : N.A Minimum Instruction Time : 0

Correct Marks : 5 Wrong Marks : 1

Question Key Details :

Key	Value
Comprehension	MCQ

Match List I with List II

LIST I		LIST II	
A.	Thappad	I.	Women's bodies and commercial gains
B.	Mimi	II.	Quality education for all
C.	Black	III.	Domestic violence and dignity
D.	Hichki	IV.	Right to a dignified life and knowledge

Choose the correct answer from the options given below:

1. A-III, B-I, C-IV, D-II
2. A-I, B-III, C-IV, D-II
3. A-III, B-I, C-II, D-IV
4. A-III, B-II, C-IV, D-I

Options :

485584146349. 1
485584146350. 2
485584146351. 3
485584146352. 4

Question Number : 203 Question Id : 48558436588 Question Type : MCQ Option Shuffling : No Is Question Mandatory : No Calculator : None Response Time : N.A Think Time : N.A Minimum Instruction Time : 0

Correct Marks : 5 Wrong Marks : 1

Question Key Details :

Key	Value
Comprehension	MCQ

ତାଲିକା I ଅନୁତ ତାଲିକା II ନେତ ଜରକୁ ।

ତାଲିକା I		ତାଲିକା II	
A.	ଥପଡ଼	I.	ତାରା ସଂଗଠନ ଓ ବାଣିଜ୍ୟ ନୀତି
B.	ମିମି	II.	ସାର୍ବଜନୀନ ଗୁଣାତ୍ମକ ଶିକ୍ଷା
C.	ବ୍ଲାକ	III.	ଗୃହେତ୍ତୁ ହିଂସା ଓ ସମ୍ମାନ
D.	ହିଚକି	IV.	ସମ୍ମାନସ୍ପଦ ଜୀବନ ଓ ଜ୍ଞାନ ଅଧିକାର

ଦିଆଯାଇଥିବା ବିକଳ୍ପରୁ ସଠିକ୍ ଉତ୍ତରଟି ବାଛନ୍ତୁ :

1. A-III, B-I, C-IV, D-II
2. A-I, B-III, C-IV, D-II
3. A-III, B-I, C-II, D-IV
4. A-III, B-II, C-IV, D-I

Options :

485584146349. 1
485584146350. 2

485584146351. 3
485584146352. 4

Question Number : 204 Question Id : 48558436589 Question Type : MCQ Option Shuffling : No Is Question Mandatory :
No Calculator : None Response Time : N.A Think Time : N.A Minimum Instruction Time : 0

Correct Marks : 5 Wrong Marks : 1

Question Key Details :

Key	Value
Comprehension	MCQ

In the story 'Idgah' the protagonist Hamid buys a _____ for _____ from the fair.

1. pair of tongs, his grandmother
2. pair of tongs, his mother
3. clay doll, himself
4. clay doll, his grandmother

Options :

485584146353. 1
485584146354. 2
485584146355. 3
485584146356. 4

Question Number : 204 Question Id : 48558436589 Question Type : MCQ Option Shuffling : No Is Question Mandatory :
No Calculator : None Response Time : N.A Think Time : N.A Minimum Instruction Time : 0

Correct Marks : 5 Wrong Marks : 1

Question Key Details :

Key	Value
Comprehension	MCQ

'ଭଦ୍ରାହ' ଋଷ୍ଟରେ ପୋତାଗୋବିନ୍ଦ ହନିବ ମେଳାରୁ _____ ପାଇଁ _____ କିଣିଥିଲା ।

1. ଜିନି ମୁଗୁଳ, ତା'ର ଭେଜେମା
2. ଜିନି ମୁଗୁଳ, ତାର ମାଆ
3. ମାଟି କଣ୍ଢେଇ, ନିଜ
4. ମାଟି କଣ୍ଢେଇ, ତା'ର ଭେଜେମା

Options :

485584146353. 1
485584146354. 2
485584146355. 3
485584146356. 4

Question Number : 205 Question Id : 48558436590 Question Type : MCQ Option Shuffling : No Is Question Mandatory :
No Calculator : None Response Time : N.A Think Time : N.A Minimum Instruction Time : 0

Correct Marks : 5 Wrong Marks : 1

Question Key Details :

Key	Value
Comprehension	MCQ

Who is the first female Indian scientist to receive a PhD degree in a scientific discipline?

1. Kamala Sohonie
2. Janaki Ammal
3. Anandibai Gopalrao Joshi
4. Asima Chaterjee

Options :

485584146357. 1
485584146358. 2
485584146359. 3
485584146360. 4

Question Number : 205 Question Id : 48558436590 Question Type : MCQ Option Shuffling : No Is Question Mandatory : No Calculator : None Response Time : N.A Think Time : N.A Minimum Instruction Time : 0

Correct Marks : 5 Wrong Marks : 1

Question Key Details :

Key	Value
Comprehension	MCQ

ପ୍ରଥମ ଭାରତୀୟ ମହିଳା ଡକ୍ଟର କିଏ ଥିଲେ, ଯିଏ ବୈଜ୍ଞାନିକ ବିଦ୍ୟାଳୟରେ ସର୍ବ ପ୍ରଥମେ ପି.ଏଚ୍.ଡି ଲାଭ କରିଥିଲେ?

1. କମଳା ସୋହୋନୀ
2. ଜାନକୀ ଅମ୍ମଲ
3. ଆନନ୍ଦିବାଇ ଗୋପାଳରାଓ ଜୋଶୀ
4. ଅସିମା ଚାଟର୍ଜୀ

Options :

485584146357. 1
485584146358. 2
485584146359. 3
485584146360. 4

Question Number : 206 Question Id : 48558436591 Question Type : MCQ Option Shuffling : No Is Question Mandatory : No Calculator : None Response Time : N.A Think Time : N.A Minimum Instruction Time : 0

Correct Marks : 5 Wrong Marks : 1

Question Key Details :

Key	Value
Comprehension	MCQ

In the film, 'Chak De India', which of the following themes was not addressed?

1. National integration
2. Child labour
3. Women Empowerment
4. Religious Harmony

Options :

485584146361. 1
485584146362. 2
485584146363. 3
485584146364. 4

Question Number : 206 Question Id : 48558436591 Question Type : MCQ Option Shuffling : No Is Question Mandatory : No Calculator : None Response Time : N.A Think Time : N.A Minimum Instruction Time : 0

Correct Marks : 5 Wrong Marks : 1

Question Key Details :

Key	Value
Comprehension	MCQ

'ଚକ ଦେ ଇଣ୍ଡିଆ'ରେ ନିମ୍ନଲିଖିତ କେଉଁ ବିଷୟ ବନ୍ଧୁ ଜପରେ ଆଧାରିତ ହୋଇ ନାହିଁ ?

1. ଜାତୀୟ ଏକତା
2. ଶିଶୁ ଶ୍ରମିକ
3. ନାରୀ ସମ୍ପୂର୍ଣ୍ଣକରଣ
4. ଧାର୍ମିକ ସମାନ୍ତତା

Options :

485584146361. 1
485584146362. 2
485584146363. 3
485584146364. 4

Question Number : 207 Question Id : 48558436592 Question Type : MCQ Option Shuffling : No Is Question Mandatory : No Calculator : None Response Time : N.A Think Time : N.A Minimum Instruction Time : 0

Correct Marks : 5 Wrong Marks : 1

Question Key Details :

Key	Value
Comprehension	MCQ

The stories by Premchand primarily deal with:

- A. Challenges faced by children
- B. issues related to women
- C. struggles of the professional class
- D. struggles of the rural poor
- E. the character of villages in medieval India

Choose the most appropriate answer from the options given below:

- 1. B, C and E only
- 2. D, A and E only
- 3. C, D and A only
- 4. A, B and D only

Options :

- 485584146365. 1
- 485584146366. 2
- 485584146367. 3
- 485584146368. 4

Question Number : 207 Question Id : 48558436592 Question Type : MCQ Option Shuffling : No Is Question Mandatory : No Calculator : None Response Time : N.A Think Time : N.A Minimum Instruction Time : 0

Correct Marks : 5 Wrong Marks : 1

Question Key Details :

Key	Value
Comprehension	MCQ

ପ୍ରେମ୍‌ଚନ୍ଦ୍ର ଦ୍ଵାରା ଗଳ୍ପ ପ୍ରାଥମିକ ସତ୍ତରରେ ରଚିତ ହୁଏ:

- A. ଶିଶୁଙ୍କ ଦ୍ଵାରା ଚ୍ୟାଲେଞ୍ଜ
- B. ନାରୀଙ୍କୁ ନେଇ ଘଟଣା
- C. ପ୍ରକୃତି ଗତ ଶ୍ରେଣୀର ସଂଘର୍ଷ
- D. ଗ୍ରାମୀଣ ସାମ୍ପ୍ରଦାୟ ସଂଘର୍ଷ
- E. ମଧ୍ୟ ଭାରତ ସ୍ଵରାଜ୍ୟ ଗ୍ରାମୀଣ ଗୁଣଗଣ

ସଠିକ୍‌ରୁ ଠିକ୍‌ରୁ ଠିକ୍‌ରୁ ଠିକ୍‌ରୁ ଠିକ୍‌ରୁ:

- 1. କେବଳ B, C ଓ E
- 2. କେବଳ D, A ଓ E
- 3. କେବଳ C, D ଓ A
- 4. କେବଳ A, B ଓ D

Options :

- 485584146365. 1
- 485584146366. 2
- 485584146367. 3
- 485584146368. 4

Question Number : 208 Question Id : 48558436593 Question Type : MCQ Option Shuffling : No Is Question Mandatory : No Calculator : None Response Time : N.A Think Time : N.A Minimum Instruction Time : 0

Correct Marks : 5 Wrong Marks : 1

Question Key Details :

Key	Value
Comprehension	MCQ

The central theme of the Hindi film, 'Dangal' is:

1. Urban-rural social divide in the state of Haryana
2. Women in a male- dominated sport
3. Relationship between siblings
4. Mother - daughter relationship

Options :

- 485584146369. 1
- 485584146370. 2
- 485584146371. 3
- 485584146372. 4

Question Number : 208 Question Id : 48558436593 Question Type : MCQ Option Shuffling : No Is Question Mandatory : No Calculator : None Response Time : N.A Think Time : N.A Minimum Instruction Time : 0

Correct Marks : 5 Wrong Marks : 1

Question Key Details :

Key	Value
Comprehension	MCQ

ହିନ୍ଦୀ ଚଳଚ୍ଚିତ୍ର "ଦଙ୍ଗଲ"ର କେନ୍ଦ୍ରୀୟ ବିଷୟବସ୍ତୁ ହେଉଛି _____

1. ହରିୟାଣା ପ୍ରଦେଶର ସହର ଓ ଗ୍ରାମ୍ୟ ସାମାଜିକ ବିଭାଜନ
2. ପୁରୁଷ ପ୍ରାଧାନ୍ୟ ଘାତରେ ନାରୀମାନଙ୍କର ଅଧିକାର
3. ଭାଇ-ଭଉଣୀ ଭିତରେ ସମ୍ପର୍କ
4. ମାଁ ଓ ଡିଅର ସମ୍ପର୍କ

Options :

- 485584146369. 1
- 485584146370. 2
- 485584146371. 3
- 485584146372. 4

Question Number : 209 Question Id : 48558436594 Question Type : MCQ Option Shuffling : No Is Question Mandatory : No Calculator : None Response Time : N.A Think Time : N.A Minimum Instruction Time : 0

Correct Marks : 5 Wrong Marks : 1

Question Key Details :

Key	Value
Comprehension	MCQ

Tagore's alternate school 'Shantiniketan' did NOT promote:

1. Open classrooms
2. Simplicity of the learning process
3. Teaching in the mother tongue
4. Discipline in children

Options :

- 485584146373. 1
- 485584146374. 2
- 485584146375. 3
- 485584146376. 4

Question Number : 209 Question Id : 48558436594 Question Type : MCQ Option Shuffling : No Is Question Mandatory : No Calculator : None Response Time : N.A Think Time : N.A Minimum Instruction Time : 0

Correct Marks : 5 Wrong Marks : 1

Question Key Details :

Key	Value
Comprehension	MCQ

ସାତୋରଫ ବିକଳ୍ପ ବିଦ୍ୟାଳୟ "ଶାନ୍ତିନିକେତନ" ପ୍ରୋତ୍ସାହିତ କରେ ନାହିଁ ?

1. ଯୁକ୍ତ ଶ୍ରେଣୀକକ୍ଷ
2. ସାଧାରଣ ଶିକ୍ଷଣ ପ୍ରକ୍ରିୟା
3. ମାତୃଭାଷାରେ ଶିକ୍ଷାପ୍ରଦାନ
4. ଜାତୀୟତାବାଦର ଶୃଙ୍ଖଳା

Options :

- 485584146373. 1
- 485584146374. 2
- 485584146375. 3
- 485584146376. 4

Question Number : 210 Question Id : 48558436595 Question Type : MCQ Option Shuffling : No Is Question Mandatory : No Calculator : None Response Time : N.A Think Time : N.A Minimum Instruction Time : 0

Correct Marks : 5 Wrong Marks : 1

Question Key Details :

Key	Value
Comprehension	MCQ

Which of the following is not a Children's novel?

1. Ahimsa
2. Charlie and the Chocolate Factory
3. A Thousand Splendid Suns
4. Wonder

Options :

485584146377. 1
485584146378. 2
485584146379. 3
485584146380. 4

Question Number : 210 Question Id : 48558436595 Question Type : MCQ Option Shuffling : No Is Question Mandatory : No Calculator : None Response Time : N.A Think Time : N.A Minimum Instruction Time : 0

Correct Marks : 5 Wrong Marks : 1

Question Key Details :

Key	Value
Comprehension	MCQ

କେଉଁଟି ଶିଶୁଙ୍କ ଉପନ୍ୟାସ ନୁହେଁ?

1. ଅହିଂସା (Ahimsa)
2. ଚାର୍ଲି ଓ ଚକୋଲେଟ କାରଖାନା (Charlie and the Chocolate Factory)
3. ଏକ ସହସ୍ର ଚମତ୍କାର ସୂର୍ଯ୍ୟ (A Thousand Splendid Suns)
4. ଆଶ୍ଚର୍ଯ୍ୟ (Wonder)

Options :

485584146377. 1
485584146378. 2
485584146379. 3
485584146380. 4

Question Number : 211 Question Id : 48558436596 Question Type : MCQ Option Shuffling : No Is Question Mandatory : No Calculator : None Response Time : N.A Think Time : N.A Minimum Instruction Time : 0

Correct Marks : 5 Wrong Marks : 1

Question Key Details :

Key	Value
Comprehension	MCQ

Which among the following are 'Pros' of 5G Technology?

- A. Greater Transmission Speed
- B. Overcrowded Radio frequency
- C. Increased connectivity
- D. Wider Coverage
- E. High Energy consumption

Choose the correct answer from the options given below:

- 1. B, C and E only
- 2. A, C and D only
- 3. B, C and D only
- 4. A, C and E only

Options :

- 485584146381. 1
- 485584146382. 2
- 485584146383. 3
- 485584146384. 4

Question Number : 211 Question Id : 48558436596 Question Type : MCQ Option Shuffling : No Is Question Mandatory : No Calculator : None Response Time : N.A Think Time : N.A Minimum Instruction Time : 0

Correct Marks : 5 Wrong Marks : 1

Question Key Details :

Key	Value
Comprehension	MCQ

ନିମ୍ନୋକ୍ତ ମଧ୍ୟରୁ କେଉଁଟି '5G' ପ୍ରଯୁକ୍ତିବିଦ୍ୟାର 'ସମ୍ଭାବନା'?

- A. ଉଚ୍ଚତର ପ୍ରାୟୋଗିକ ଚାପ
- B. ଓଭରକ୍ରାଉଡ଼େଡ୍ ରେଡିଓ ଫ୍ରିକ୍ୱେନ୍ସି
- C. ବାସ୍ତବିକ କନେକ୍ଟିଭିଟି
- D. ଖାଲି କଭରେଜ୍
- E. ଉଚ୍ଚ ଫ୍ରିକ୍ୱେନ୍ସି କନସମ୍ପ୍ଟସନ୍

ବିଆପାରଣପୂର୍ବକ ବିକଳରୁ ସଠିକ ଉତ୍ତରଟି ଚାଛନ୍ତୁ:

- 1. କେବଳ B, C ଓ E
- 2. କେବଳ A, C ଓ D
- 3. କେବଳ B, C ଓ D
- 4. କେବଳ A, C ଓ E

Options :

- 485584146381. 1
- 485584146382. 2
- 485584146383. 3
- 485584146384. 4

Question Number : 212 Question Id : 48558436597 Question Type : MCQ Option Shuffling : No Is Question Mandatory : No Calculator : None Response Time : N.A Think Time : N.A Minimum Instruction Time : 0

Correct Marks : 5 Wrong Marks : 1

Question Key Details :

Key	Value
Comprehension	MCQ

The Deep web on internet which is not accessible by the regular search engines like Google Bing is known as:

- 1. Black web
- 2. Brown web
- 3. Dirty web
- 4. Dark web

Options :

- 485584146385. 1
- 485584146386. 2
- 485584146387. 3
- 485584146388. 4

Question Number : 212 Question Id : 48558436597 Question Type : MCQ Option Shuffling : No Is Question Mandatory : No Calculator : None Response Time : N.A Think Time : N.A Minimum Instruction Time : 0

Correct Marks : 5 Wrong Marks : 1

Question Key Details :

Key	Value
Comprehension	MCQ

ଇଣ୍ଟରନେଟର ଉପରେ ଖେପ୍ ଯାହା ଗୁଗଲ ପରି ସେରୁଆର ସର୍ଚ୍ଚ ଇଞ୍ଜିନର ଅନ୍ୟାନ୍ୟତା ପରିବହନ କରେ

- 1. ବ୍ଲାକ୍ ଷେପ୍
- 2. ବ୍ରାଉନ ଷେପ୍
- 3. ଡାର୍ଟି ଷେପ୍
- 4. ଡାର୍କ ଷେପ୍

Options :

- 485584146385. 1
- 485584146386. 2
- 485584146387. 3
- 485584146388. 4

Question Number : 213 Question Id : 48558436598 Question Type : MCQ Option Shuffling : No Is Question Mandatory : No Calculator : None Response Time : N.A Think Time : N.A Minimum Instruction Time : 0

Correct Marks : 5 Wrong Marks : 1

Question Key Details :

Key	Value
Comprehension	MCQ

In order to foster scientific temper through the means of exciting educational experiences, a teacher can take her students to a:

1. Museum
2. Music program
3. Planetarium
4. Art gallery

Options :

- 485584146389. 1
- 485584146390. 2
- 485584146391. 3
- 485584146392. 4

Question Number : 213 Question Id : 48558436598 Question Type : MCQ Option Shuffling : No Is Question Mandatory : No Calculator : None Response Time : N.A Think Time : N.A Minimum Instruction Time : 0

Correct Marks : 5 Wrong Marks : 1

Question Key Details :

Key	Value
Comprehension	MCQ

କାଳି ଆୟୁର୍ବିଦ୍ୟା ପିତ୍ତାମୟ ଅଭିଜ୍ଞତାରେ ବୈଜ୍ଞାନିକ ଚିନ୍ତାଧାରାକୁ ଉତ୍ସାହିତ କରିବା ପାଇଁ ଜଣେ ଶିକ୍ଷୟିତ୍ରୀ ତାଙ୍କର ଛାତ୍ର-ଛାତ୍ରୀଙ୍କୁ ବୁଲେଇବାକୁ ନେଇପାରିବା ଛାନ୍ଦ:

1. ସଂସ୍କୃତାବଳୀ
2. ସଙ୍ଗୀତ କାର୍ଯ୍ୟକ୍ରମ
3. ପ୍ଲାନେଟେରିୟମ
4. ଆର୍ଟ ଗ୍ୟାଲେରୀ

Options :

- 485584146389. 1
- 485584146390. 2
- 485584146391. 3
- 485584146392. 4

Question Number : 214 Question Id : 48558436599 Question Type : MCQ Option Shuffling : No Is Question Mandatory : No Calculator : None Response Time : N.A Think Time : N.A Minimum Instruction Time : 0

Correct Marks : 5 Wrong Marks : 1

Question Key Details :

The first country to have entered the Mars orbit in its first attempt is:

1. USA
2. China
3. India
4. Russia

Options :

485584146397. 1
485584146398. 2
485584146399. 3
485584146400. 4

Question Number : 215 Question Id : 48558436600 Question Type : MCQ Option Shuffling : No Is Question Mandatory : No Calculator : None Response Time : N.A Think Time : N.A Minimum Instruction Time : 0

Correct Marks : 5 Wrong Marks : 1

Question Key Details :

Key	Value
Comprehension	MCQ

କେଉଁ ଦେଶଟି ତା'ର ପ୍ରଥମ ଚେଷ୍ଟାରେ ମଙ୍ଗଳ ଗ୍ରହର କକ୍ଷ ପଥରେ ପ୍ରବେଶ କରିଥିଲା?

1. ଯୁଏସଏ
2. ଚାଇନା
3. ଭାରତ
4. ରୁଷିଆ

Options :

485584146397. 1
485584146398. 2
485584146399. 3
485584146400. 4

Question Number : 216 Question Id : 48558436601 Question Type : MCQ Option Shuffling : No Is Question Mandatory : No Calculator : None Response Time : N.A Think Time : N.A Minimum Instruction Time : 0

Correct Marks : 5 Wrong Marks : 1

Question Key Details :

Key	Value
Comprehension	MCQ

The project of 'NASA' targeting the landing of first woman/women astronaut/s on moon is known as:

1. MOM
2. ARTEMIS
3. MISMOON
4. Moon opposition

Options :

485584146401. 1
485584146402. 2
485584146403. 3
485584146404. 4

Question Number : 216 Question Id : 48558436601 Question Type : MCQ Option Shuffling : No Is Question Mandatory : No Calculator : None Response Time : N.A Think Time : N.A Minimum Instruction Time : 0

Correct Marks : 5 Wrong Marks : 1

Question Key Details :

Key	Value
Comprehension	MCQ

ବ୍ରହ୍ମସ୍ପଷ୍ଟରେ ପ୍ରଥମ ମହିଳା ମହାକାଶଚାରୀ ଯାଏ ଦେବାପାଇଁ ନାସା (NASA) ଦ୍ୱାରା ଆରମ୍ଭ ହୋଇଥିବା ପ୍ରକଳ୍ପର ନାମ:

1. MOM (ଏମ୍‌ଓଏମ୍)
2. ARTEMIS (ଏଆର୍‌ଟିଏମ୍‌ଆଇଏସ୍)
3. MISMOON (ଏମ୍‌ଆଇଏସ୍‌ଏମ୍‌ଓଏମ୍)
4. Moon opposition (ମୁନ୍ ଅପୋଜିସନ୍)

Options :

485584146401. 1
485584146402. 2
485584146403. 3
485584146404. 4

Question Number : 217 Question Id : 48558436602 Question Type : MCQ Option Shuffling : No Is Question Mandatory : No Calculator : None Response Time : N.A Think Time : N.A Minimum Instruction Time : 0

Correct Marks : 5 Wrong Marks : 1

Question Key Details :

Key	Value
Comprehension	MCQ

Which of the following is NOT true: The turning points of the graph of a function :

1. Represent local maxima and local minima
2. Represent Absolute maxima and Absolute minima
3. Represent point of inflexion
4. Represent neither local maxima nor local minima

Options :

485584146405. 1
485584146406. 2
485584146407. 3
485584146408. 4

Question Number : 217 Question Id : 48558436602 Question Type : MCQ Option Shuffling : No Is Question Mandatory : No Calculator : None Response Time : N.A Think Time : N.A Minimum Instruction Time : 0

Correct Marks : 5 Wrong Marks : 1

Question Key Details :

Key	Value
Comprehension	MCQ

ନିମ୍ନଲିଖିତ ମଧ୍ୟରୁ କେଉଁଟି ଠିକ୍ ନୁହେଁ । ଗ୍ରାଫର ଚର୍ଚ୍ଚିତ୍ ପଏଣ୍ଟର କାର୍ଯ୍ୟ:

1. ସ୍ଥାନୀୟ ସର୍ବାଧିକ ଓ ସ୍ଥାନୀୟ ସର୍ବନିମ୍ନ ଉପସାପନ
2. ସର୍ବାଧିକ ସାପ୍ତକ ଓ ସର୍ବନିମ୍ନ ସାପ୍ତକ ଉପସାପନ
3. ପଏଣ୍ଟ ବକାୟିତ କରି ଉପସାପନ କରିବା
4. ସ୍ଥାନୀୟ ସର୍ବାଧିକ ଓ ସ୍ଥାନୀୟ ସର୍ବନିମ୍ନ ଥିୁ ଉପସାପନ କରିବା ନାହିଁ

Options :

485584146405. 1
485584146406. 2
485584146407. 3
485584146408. 4

Question Number : 218 Question Id : 48558436603 Question Type : MCQ Option Shuffling : No Is Question Mandatory : No Calculator : None Response Time : N.A Think Time : N.A Minimum Instruction Time : 0

Correct Marks : 5 Wrong Marks : 1

Question Key Details :

Key	Value
Comprehension	MCQ

Any teaching activity which puts before the students the real problems, that they have to solve for themselves, problems for which there are no easy solutions in any book _____.

1. brings them close to guide books
2. makes them skilled
3. crafts their activity
4. sharpens their intelligence

Options :

- 485584146409. 1
- 485584146410. 2
- 485584146411. 3
- 485584146412. 4

Question Number : 218 Question Id : 48558436603 Question Type : MCQ Option Shuffling : No Is Question Mandatory : No Calculator : None Response Time : N.A Think Time : N.A Minimum Instruction Time : 0

Correct Marks : 5 Wrong Marks : 1

Question Key Details :

Key	Value
Comprehension	MCQ

ଯେକୌଣସି ଶିକ୍ଷଣ ପ୍ରକ୍ରିୟାରେ ବାସ୍ତବ ସମସ୍ୟା ଉପରେ ଛାତ୍ରଛାତ୍ରୀ ମାନଙ୍କୁ ଉପଲବ୍ଧ କରିବା, ଯାହା ସେମାନେ ନିଜେ ସମାଧାନ କରିବେ, ଯେକୌଣସି ପୁସ୍ତକରେ ସମାଧାନର ପଥ ସହଜ ନ ହେବା ହେଉଛି:

1. ସେମାନଙ୍କୁ ବାହାରି ଦେବା ପାଇଁ କରିବା
2. ସେମାନଙ୍କୁ ବନ୍ଧ କରିବା
3. ସେମାନଙ୍କର ଭିତରୁ ଗ୍ରାହ୍ୟ କରିବା
4. ଦୁର୍ବଳତାକୁ ଚାଣ୍ଡ କରିବା

Options :

- 485584146409. 1
- 485584146410. 2
- 485584146411. 3
- 485584146412. 4

Question Number : 219 Question Id : 48558436604 Question Type : MCQ Option Shuffling : No Is Question Mandatory : No Calculator : None Response Time : N.A Think Time : N.A Minimum Instruction Time : 0

Correct Marks : 5 Wrong Marks : 1

Question Key Details :

Key	Value
Comprehension	MCQ

A mathematics teacher told the students that her laptop and phone can run out of charge independently of each other. The probability that her phone is out of charge is 0.2 and the probability that they are both out of charge is 0.06. Find the probability that her laptop is out of charge.

1. 0.86

2. 0.4

3. 0.3

4. 0.14

Options :

485584146413. 1

485584146414. 2

485584146415. 3

485584146416. 4

Question Number : 219 Question Id : 48558436604 Question Type : MCQ Option Shuffling : No Is Question Mandatory : No Calculator : None Response Time : N.A Think Time : N.A Minimum Instruction Time : 0

Correct Marks : 5 Wrong Marks : 1

Question Key Details :

Key	Value
Comprehension	MCQ

ଗୋଟିଏ ଗଣିତ ଶିକ୍ଷକ ଛାତ୍ରଛାତ୍ରୀଙ୍କୁ କହୁଛି ଯେ ଲାପଟପ ଓ ଫୋନ୍ ସ୍ୱାଧୀନତା ଭାବରେ ପାରସ୍ପରିକ ଚାର୍ଜ କରି ପାରନ୍ତିନାହିଁ, ସମ୍ଭାବ୍ୟ ରେ ତାଙ୍କ ଫୋନ୍ 0.2 କିମ୍ବା ଦୁଇଟି 0.06 ଚାର୍ଜ ବାହାରେ ଥାଏ । ସମ୍ଭାବ୍ୟ ଅର୍ଥରେ ତାଙ୍କର ଲାପଟପ ଚାର୍ଜ ବାହାରେ କେତେ ରହିବ?

1. 0.86

2. 0.4

3. 0.3

4. 0.14

Options :

485584146413. 1

485584146414. 2

485584146415. 3

485584146416. 4

Question Number : 220 Question Id : 48558436605 Question Type : MCQ Option Shuffling : No Is Question Mandatory : No Calculator : None Response Time : N.A Think Time : N.A Minimum Instruction Time : 0

Correct Marks : 5 Wrong Marks : 1

Question Key Details :

Key	Value
Comprehension	MCQ

By explaining the theory of probability a teacher told that "For a particular E_1 we can use a special formula."

Which theorem is he/she teaching?

1. Conditional Probability Theorem
2. Multiplication Theorem
3. Baye's Theorem
4. Total Probability Theorem

Options :

485584146417. 1
485584146418. 2
485584146419. 3
485584146420. 4

Question Number : 220 Question Id : 48558436605 Question Type : MCQ Option Shuffling : No Is Question Mandatory : No Calculator : None Response Time : N.A Think Time : N.A Minimum Instruction Time : 0

Correct Marks : 5 Wrong Marks : 1

Question Key Details :

Key	Value
Comprehension	MCQ

ସାମାନ୍ୟ ଅର୍ଥରେ ପରୀକ୍ଷାକୁ ବ୍ୟାଖ୍ୟା କଲା ବେଳେ ଶିକ୍ଷକ ଜଣକ କହୁଥିଲେ ଯେ "ସ୍ୱତନ୍ତ୍ର E ପାଇଁ, ଆମେ ଏକ ସ୍ୱତନ୍ତ୍ର ପର୍ଯ୍ୟୁକ୍ତ ବ୍ୟବହାର କରୁ।

କେଉଁ ପରୀକ୍ଷା ସେ ଶିକ୍ଷାଦେଇଛି ?

1. କଣ୍ଡିସନାଲ ପ୍ରୋବାବିଲିଟି ଥିଓରମ୍
2. ମଲ୍ଟିପ୍ଲିକେସନ୍ ଥିଓରମ୍
3. ବାୟେସ୍ ଥିଓରମ୍
4. ଟୋଟାଲ ପ୍ରୋବାବିଲିଟି ଥିଓରମ୍

Options :

485584146417. 1
485584146418. 2
485584146419. 3
485584146420. 4

Question Number : 221 Question Id : 48558436606 Question Type : MCQ Option Shuffling : No Is Question Mandatory : No Calculator : None Response Time : N.A Think Time : N.A Minimum Instruction Time : 0

Correct Marks : 5 Wrong Marks : 1

Question Key Details :

Key	Value
Comprehension	MCQ

If a child draws a tree by observing the trees in her surroundings and her teacher introduced scale drawings to her, the experience can help her to develop a _____.

1. sense of aesthetics
2. sense of proportion
3. sense of perspective
4. sense of transference

Options :

485584146421. 1
485584146422. 2
485584146423. 3
485584146424. 4

Question Number : 221 Question Id : 48558436606 Question Type : MCQ Option Shuffling : No Is Question Mandatory : No Calculator : None Response Time : N.A Think Time : N.A Minimum Instruction Time : 0

Correct Marks : 5 Wrong Marks : 1

Question Key Details :

Key	Value
Comprehension	MCQ

ଯଦି ଗୋଟିଏ ଛୁଆ ତା' ଆଗରେ ଥିବା ଗଛଗୁଡ଼ିକୁ ନିରୀକ୍ଷଣ କରି ଗୋଟିଏ ଗଛର ଚିତ୍ର ଅଙ୍କନ କରେ ଏବଂ ତା'ର ଶିକ୍ଷକ ତାକୁ ଷ୍ଟେଲ୍ ଡ୍ରଇଂ ବାବଦରେ ଜଣାନ୍ତୁ, ଯେଉଁ ଅନୁଭୂତି ତାକୁ _____ ବିକାଶ କରିବାରେ ସାହାଯ୍ୟ କରିବ ।

1. ସୌନ୍ଦର୍ଯ୍ୟର ଭାବନା
2. ଅନୁପାତର ଭାବନା
3. ଦୃଷ୍ଟିକୋଣର ଭାବନା
4. ସ୍ଥାନାନ୍ତରଣର ଭାବନା

Options :

485584146421. 1
485584146422. 2
485584146423. 3
485584146424. 4

Question Number : 222 Question Id : 48558436607 Question Type : MCQ Option Shuffling : No Is Question Mandatory : No Calculator : None Response Time : N.A Think Time : N.A Minimum Instruction Time : 0

Correct Marks : 5 Wrong Marks : 1

Question Key Details :

Key	Value
Comprehension	MCQ

A lot of school children find mathematics very difficult and social sciences easy. One of the reasons for their perceptive is that

1. mathematics demands expression
2. mathematics is not common knowledge
3. mathematics demands precision
4. mathematics involves concrete images

Options :

485584146425. 1
485584146426. 2
485584146427. 3
485584146428. 4

Question Number : 222 Question Id : 48558436607 Question Type : MCQ Option Shuffling : No Is Question Mandatory : No Calculator : None Response Time : N.A Think Time : N.A Minimum Instruction Time : 0

Correct Marks : 5 Wrong Marks : 1

Question Key Details :

Key	Value
Comprehension	MCQ

ଅନେକ ବିଦ୍ୟାର୍ଥୀଙ୍କର ଇତିହାସିକ ଗଣିତ ଅଭ୍ୟାସ କଷ୍ଟକର ଏବଂ ସାମାଜିକ ବିଜ୍ଞାନ ସହଜ ବୋଲି ଦେଖାଯାଇଛି । ସେମାନଙ୍କର ଏହି ଧାରଣା ପଛରେ ଥିବା ପ୍ରମୁଖ କାରଣ:

1. ଗଣିତ ଅନେକ ସ୍ତର ଉପରେ ନିର୍ଭର କରେ
2. ଗଣିତ ଗୋଟିଏ ସାଧାରଣ ଜ୍ଞାନ ବୃକ୍ଷ
3. ଗଣିତ ସଠିକତା ଆବଶ୍ୟକ କରେ
4. ଗଣିତରେ ବାସ୍ତବ ଛବି ଥାଏ

Options :

485584146425. 1
485584146426. 2
485584146427. 3
485584146428. 4

Question Number : 223 Question Id : 48558436608 Question Type : MCQ Option Shuffling : No Is Question Mandatory : No Calculator : None Response Time : N.A Think Time : N.A Minimum Instruction Time : 0

Correct Marks : 5 Wrong Marks : 1

Question Key Details :

Key	Value
Comprehension	MCQ

National Gallery of Modern Art (NGMA) is situated in

1. London
2. California
3. Kolkata
4. New Delhi

Options :

485584146429. 1
485584146430. 2
485584146431. 3
485584146432. 4

Question Number : 223 Question Id : 48558436608 Question Type : MCQ Option Shuffling : No Is Question Mandatory : No Calculator : None Response Time : N.A Think Time : N.A Minimum Instruction Time : 0

Correct Marks : 5 Wrong Marks : 1

Question Key Details :

Key	Value
Comprehension	MCQ

ଜାତୀୟ ଆଧୁନିକ କଳା ଗ୍ୟାଲେରୀ (National Gallery of Modern Art (NGMA)) କେଉଁଠି ଅବସ୍ଥିତ?

1. ଲଣ୍ଡନ
2. କାଲିଫୋର୍ନିଆ
3. କୋଲକାତା
4. ନୂଆ ଦିଲ୍ଲୀ

Options :

485584146429. 1
485584146430. 2
485584146431. 3
485584146432. 4

Question Number : 224 Question Id : 48558436609 Question Type : MCQ Option Shuffling : No Is Question Mandatory : No Calculator : None Response Time : N.A Think Time : N.A Minimum Instruction Time : 0

Correct Marks : 5 Wrong Marks : 1

Question Key Details :

Key	Value
Comprehension	MCQ

Which School of Art was also known as Graeco Buddhist School of Art?

1. Amravati School of Art
2. Mathura School of Art
3. Gandhara School of Art
4. Bengal School of Art

Options :

485584146433. 1
485584146434. 2
485584146435. 3
485584146436. 4

Question Number : 224 Question Id : 48558436609 Question Type : MCQ Option Shuffling : No Is Question Mandatory : No Calculator : None Response Time : N.A Think Time : N.A Minimum Instruction Time : 0

Correct Marks : 5 Wrong Marks : 1

Question Key Details :

Key	Value
Comprehension	MCQ

ବେଉଁ କଳା ବିଦ୍ୟାଳୟ ଗ୍ରୀକ୍‌ବୋଧୀ ବୁଦ୍ଧ ଷ୍ଟିଲ୍ ଆର୍ଟ ଜାକରେ ଜଣାଶୁଣା?

1. ଅମରାବତୀ କଳା ବିଦ୍ୟାଳୟ
2. ମଥୁରା କଳା ବିଦ୍ୟାଳୟ
3. ଗାନ୍ଧାର କଳା ବିଦ୍ୟାଳୟ
4. ବେଙ୍ଗଲ କଳା ବିଦ୍ୟାଳୟ

Options :

485584146433. 1
485584146434. 2
485584146435. 3
485584146436. 4

Question Number : 225 Question Id : 48558436610 Question Type : MCQ Option Shuffling : No Is Question Mandatory : No Calculator : None Response Time : N.A Think Time : N.A Minimum Instruction Time : 0

Correct Marks : 5 Wrong Marks : 1

Question Key Details :

Key	Value
Comprehension	MCQ

What was the profession of Partha Mitter?

1. Painter
2. Sculptor
3. Art Historian
4. Architect

Options :

485584146437. 1
485584146438. 2
485584146439. 3
485584146440. 4

Question Number : 225 Question Id : 48558436610 Question Type : MCQ Option Shuffling : No Is Question Mandatory : No Calculator : None Response Time : N.A Think Time : N.A Minimum Instruction Time : 0

Correct Marks : 5 Wrong Marks : 1

Question Key Details :

Key	Value
Comprehension	MCQ

ପାର୍ଥ ମିତ୍ଟରଙ୍କ ବୃତ୍ତ/ବୃତ୍ତି କ'ଣ ଥିଲା?

1. ଚିତ୍ରକାର
2. ପଥର ଶିଳ୍ପୀ
3. କଳା ଐତିହାସିକ
4. ସ୍ଥପତି

Options :

485584146437. 1
485584146438. 2
485584146439. 3
485584146440. 4

Question Number : 226 Question Id : 48558436611 Question Type : MCQ Option Shuffling : No Is Question Mandatory : No Calculator : None Response Time : N.A Think Time : N.A Minimum Instruction Time : 0

Correct Marks : 5 Wrong Marks : 1

Question Key Details :

Key	Value
Comprehension	MCQ

'Contemporary Art in India : A perspective' is a book written by

1. Pran Nath Mago

2. Jasleen Dhamija

3. K. R. Srinivasan

4. Devi Prasad

Options :

485584146441. 1

485584146442. 2

485584146443. 3

485584146444. 4

Question Number : 226 Question Id : 48558436611 Question Type : MCQ Option Shuffling : No Is Question Mandatory : No Calculator : None Response Time : N.A Think Time : N.A Minimum Instruction Time : 0

Correct Marks : 5 Wrong Marks : 1

Question Key Details :

Key	Value
Comprehension	MCQ

'କଟକମୋରାରି ଆର୍ଟ୍ ଇନ୍ ଇଣ୍ଡିଆ: ଏ ପର୍ସପେକ୍ଟିଭ୍' ସହିତ ରଚୟତା:

1. ପ୍ରାଣ ନାଥ ମାଗୋ

2. ଜସଲିନ ଧାମିଜା

3. କେ. ଆର୍. ଶ୍ରୀନିବାସନ

4. ଦେବୀ ପ୍ରସାଦ

Options :

485584146441. 1

485584146442. 2

485584146443. 3

485584146444. 4

Question Number : 227 Question Id : 48558436612 Question Type : MCQ Option Shuffling : No Is Question Mandatory : No Calculator : None Response Time : N.A Think Time : N.A Minimum Instruction Time : 0

Correct Marks : 5 Wrong Marks : 1

Question Key Details :

Key	Value
Comprehension	MCQ

A technique of portraying an object to be closer than it actually is, or having less depth or distance, is called

1. Depth of field
2. Foreshortening
3. Focusing
4. Illustration

Options :

485584146445. 1
485584146446. 2
485584146447. 3
485584146448. 4

Question Number : 227 Question Id : 48558436612 Question Type : MCQ Option Shuffling : No Is Question Mandatory : No Calculator : None Response Time : N.A Think Time : N.A Minimum Instruction Time : 0

Correct Marks : 5 Wrong Marks : 1

Question Key Details :

Key	Value
Comprehension	MCQ

କୋଟିଏ ବସ୍ତୁର ପଟେ ଉଲୋଚନ କୌଶଳ ଡାଲ ନିକଟରେ ରହିବାକୁ କିମ୍ବା ଅଳ୍ପ ଦୂରତାକୁ _____ କୁହାଯାଏ ।

1. ପଡିଆର ଗଭୀରତା
2. ହିତ କରିବା ପାଇଁ ପୂର୍ବ ସୂଚନା
3. ଉଲୋଚିତ କରିବା
4. ଅବୁଝାମନ କରିବା

Options :

485584146445. 1
485584146446. 2
485584146447. 3
485584146448. 4

Question Number : 228 Question Id : 48558436613 Question Type : MCQ Option Shuffling : No Is Question Mandatory : No Calculator : None Response Time : N.A Think Time : N.A Minimum Instruction Time : 0

Correct Marks : 5 Wrong Marks : 1

Question Key Details :

Key	Value
Comprehension	MCQ

The artwork 'Santhal Family' made by Ramkinker Vajjis is which medium/ form

1. Oil Painting
2. Mural
3. Sculpture
4. Monograph

Options :

485584146449. 1
485584146450. 2
485584146451. 3
485584146452. 4

Question Number : 228 Question Id : 48558436613 Question Type : MCQ Option Shuffling : No Is Question Mandatory : No Calculator : None Response Time : N.A Think Time : N.A Minimum Instruction Time : 0

Correct Marks : 5 Wrong Marks : 1

Question Key Details :

Key	Value
Comprehension	MCQ

ସାଞ୍ଚାଳ ପରିବାଚକ ଚିତ୍ରକାର୍ଯ୍ୟକୁ ରାମକିଙ୍କର ରାଜକିସ ବେଉଁ ମାଧ୍ୟମରେ କରିଥିଲେ?

1. ତୈଳ ଚିତ୍ର
2. ପଥର ଖୋଦିତ
3. ଖୋଦିତ
4. ଭୂମି ମାଧ୍ୟମରେ

Options :

485584146449. 1
485584146450. 2
485584146451. 3
485584146452. 4

Question Number : 229 Question Id : 48558436614 Question Type : MCQ Option Shuffling : No Is Question Mandatory : No Calculator : None Response Time : N.A Think Time : N.A Minimum Instruction Time : 0

Correct Marks : 5 Wrong Marks : 1

Question Key Details :

Key	Value
Comprehension	MCQ

Match List I with List II

LIST I		LIST II	
A.	Intrusive igneous rock	I.	Slate
B.	Extrusive igneous rock	II.	Basalt
C.	Sedimentary rock	III.	Granite
D.	Metamorphic rock	IV.	Lime stone

Choose the correct answer from the options given below:

1. A-III, B-II, C-IV, D-I
2. A-I, B-II, C-III, D-IV
3. A-IV, B-III, C-II, D-I
4. A-II, B-III, C-I, D-IV

Options :

485584146453. 1
485584146454. 2
485584146455. 3
485584146456. 4

Question Number : 229 Question Id : 48558436614 Question Type : MCQ Option Shuffling : No Is Question Mandatory : No Calculator : None Response Time : N.A Think Time : N.A Minimum Instruction Time : 0

Correct Marks : 5 Wrong Marks : 1

Question Key Details :

Key	Value
Comprehension	MCQ

ତାଲିକା I ସହିତ ତାଲିକା II ମେଳ କରନ୍ତୁ ।

ତାଲିକା I		ତାଲିକା II	
A.	ଆବେଶଭରୀୟ ଆବେଶକଣିକା	I.	ସ୍ଲେଟ
B.	ବହୁତ୍ୱର ଆବେଶକଣିକା	II.	ଧୂସର ଆବେଶକଣିକା ପଥର
C.	ବାନିଆ ପଥର	III.	ଗ୍ରାନାଇଟ
D.	କଠିନ ପଥର	IV.	ମାକଡ଼ା ପଥର

ଦିଆଯାଇଥିବା ବିକଳ୍ପରୁ ଠିକ୍ ଉତ୍ତରଟି ବାଛନ୍ତୁ:

1. A-III, B-II, C-IV, D-I
2. A-I, B-II, C-III, D-IV
3. A-IV, B-III, C-II, D-I
4. A-II, B-III, C-I, D-IV

Options :

485584146453. 1
485584146454. 2

485584146455. 3

485584146456. 4

Question Number : 230 Question Id : 48558436615 Question Type : MCQ Option Shuffling : No Is Question Mandatory : No Calculator : None Response Time : N.A Think Time : N.A Minimum Instruction Time : 0

Correct Marks : 5 Wrong Marks : 1

Question Key Details :

Key	Value
Comprehension	MCQ

The content of teaching social sciences should aim at raising students' awareness through

1. questioning of familiar social reality
2. enacting of familiar social reality
3. developing a neutral perspective on society
4. transmitting an idea of society

Options :

485584146457. 1

485584146458. 2

485584146459. 3

485584146460. 4

Question Number : 230 Question Id : 48558436615 Question Type : MCQ Option Shuffling : No Is Question Mandatory : No Calculator : None Response Time : N.A Think Time : N.A Minimum Instruction Time : 0

Correct Marks : 5 Wrong Marks : 1

Question Key Details :

Key	Value
Comprehension	MCQ

ସାମାଜିକ ବିଜ୍ଞାନ ଶିକ୍ଷଣର ବିଷୟକୁ ସାଧାରଣତଃ ସଚେତନ ଛାତ୍ରଛାତ୍ରୀଙ୍କ ବିକାଶର ଉଦ୍ଦେଶ୍ୟକୁ ନେଇ ସେତା ଉଚିତ ଯାହା:

1. ସାମାଜିକ ବାସ୍ତବତା ଉପରେ ଜଣାଶୁଣା ପ୍ରଶ୍ନ
2. ସାମାଜିକ ବାସ୍ତବତା ଉପରେ ଜଣାଶୁଣା କର୍ମ ପଦ୍ଧତି
3. ସମାଜରେ ଏକ ସମତଳ ରକ୍ଷା ଭିତ୍ତିକ ବିକାଶ
4. ସମାଜର ଧାରଣାକୁ ପ୍ରତିପଦିତ କରିବା

Options :

485584146457. 1

485584146458. 2

485584146459. 3

485584146460. 4

Question Number : 231 Question Id : 48558436616 Question Type : MCQ Option Shuffling : No Is Question Mandatory : No Calculator : None Response Time : N.A Think Time : N.A Minimum Instruction Time : 0

Correct Marks : 5 Wrong Marks : 1

Question Key Details :

Key	Value
Comprehension	MCQ

Who wrote the book "History of British India" ?

1. James Mill
2. James Rainil
3. Warren Hastings
4. Cornwallis

Options :

485584146461. 1
 485584146462. 2
 485584146463. 3
 485584146464. 4

Question Number : 231 Question Id : 48558436616 Question Type : MCQ Option Shuffling : No Is Question Mandatory : No Calculator : None Response Time : N.A Think Time : N.A Minimum Instruction Time : 0

Correct Marks : 5 Wrong Marks : 1

Question Key Details :

Key	Value
Comprehension	MCQ

"ସିଦ୍ଧି ଅଟ ଚିଚିତ୍ର ଇଣ୍ଡିଆ" ପୁସ୍ତକର ରଚୟିତା କିଏ ?

1. ଜେମ୍ସ ମିଲ
2. ଜେମ୍ସ ରାଇନିଲ
3. ୱାରେନ ହଷ୍ଟିଙ୍ଗ୍ସ
4. କୋର୍ଣ୍ଣୱାଲିସ୍

Options :

485584146461. 1
 485584146462. 2
 485584146463. 3
 485584146464. 4

Question Number : 232 Question Id : 48558436617 Question Type : MCQ Option Shuffling : No Is Question Mandatory : No Calculator : None Response Time : N.A Think Time : N.A Minimum Instruction Time : 0

Correct Marks : 5 Wrong Marks : 1

Question Key Details :

Key	Value
Comprehension	MCQ

The school level social sciences encompass _____ concerns of society and include a wide range of content drawn from various disciplines.

1. unitary
2. overarching
3. diverse
4. sweeping

Options :

485584146465. 1
485584146466. 2
485584146467. 3
485584146468. 4

Question Number : 232 Question Id : 48558436617 Question Type : MCQ Option Shuffling : No Is Question Mandatory : No Calculator : None Response Time : N.A Think Time : N.A Minimum Instruction Time : 0

Correct Marks : 5 Wrong Marks : 1

Question Key Details :

Key	Value
Comprehension	MCQ

ବିଦ୍ୟାଳୟ କ୍ଷରଣ ସାମାଜିକ ପାଠ ସମାଜର ବିଭିନ୍ନ ବ୍ୟବସ୍ଥା ଓ ବିଭିନ୍ନ ପ୍ରକାର ଶୃଙ୍ଖଳା ନେଇ ଆଧାରିତ ହୋଇଥାଏ।

1. ଏକତା
2. ଅତ୍ୟଧିକ ମୂଲ୍ୟବୋଧ ଭିତ୍ତିକ
3. ଭିନ୍ନତା
4. ସ୍ୱଚ୍ଛତା

Options :

485584146465. 1
485584146466. 2
485584146467. 3
485584146468. 4

Question Number : 233 Question Id : 48558436618 Question Type : MCQ Option Shuffling : No Is Question Mandatory : No Calculator : None Response Time : N.A Think Time : N.A Minimum Instruction Time : 0

Correct Marks : 5 Wrong Marks : 1

Question Key Details :

Key	Value
Comprehension	MCQ

Which of the following subjects has replaced 'civics' in the school syllabus?

1. Civilization
2. Social and Political life
3. Economic and Social Life
4. Nationalism

Options :

485584146469. 1
485584146470. 2
485584146471. 3
485584146472. 4

Question Number : 233 Question Id : 48558436618 Question Type : MCQ Option Shuffling : No Is Question Mandatory : No Calculator : None Response Time : N.A Think Time : N.A Minimum Instruction Time : 0

Correct Marks : 5 Wrong Marks : 1

Question Key Details :

Key	Value
Comprehension	MCQ

ବିଦ୍ୟାଳୟ ପାଠ୍ୟ ଉପାଦାନରେ ନିମ୍ନୋକ୍ତ କେଉଁ ବିଷୟ ବସ୍ତୁ ନବର ବିଜ୍ଞାନ ଭିତ୍ତିକ?

1. ସଭ୍ୟତା
2. ସମାଜ ଓ ରାଜନୈତିକ ଜୀବନ
3. ଆର୍ଥିକ ଓ ସାମାଜିକ ବିଜ୍ଞାନ
4. ଜାତୀୟତା

Options :

485584146469. 1
485584146470. 2
485584146471. 3
485584146472. 4

Question Number : 234 Question Id : 48558436619 Question Type : MCQ Option Shuffling : No Is Question Mandatory : No Calculator : None Response Time : N.A Think Time : N.A Minimum Instruction Time : 0

Correct Marks : 5 Wrong Marks : 1

Question Key Details :

Key	Value
Comprehension	MCQ

Today, if a teacher wants to teach the importance of good deeds and practicing non-violence, she can use the following as a resource:

1. Ambedkar's writings
2. Jaina teachings
3. Puranic Literature
4. Akbarnama

Options :

485584146473. 1
485584146474. 2
485584146475. 3
485584146476. 4

Question Number : 234 Question Id : 48558436619 Question Type : MCQ Option Shuffling : No Is Question Mandatory : No Calculator : None Response Time : N.A Think Time : N.A Minimum Instruction Time : 0

Correct Marks : 5 Wrong Marks : 1

Question Key Details :

Key	Value
Comprehension	MCQ

ଆଜିକାଲି ଦିନରେ ଶିକ୍ଷକଟିଏ ନବି ଅହିଂସା ମାର୍ଗର ଦୁରୁତ୍ତ ବ୍ୟବହାର କରି ପାଠ ପଢ଼ାଇବାକୁ ଚାହାନ୍ତି କିମ୍ବା କେଉଁ ଶାଠକ ବୁଦ୍ଧି ଆପଣେଇବେ?

1. ଆତ୍ମବିକଳତା କେଣା
2. ଚୈତ୍ୟମା ଶିକ୍ଷା
3. ପୌରାଣିକ ସାହିତ୍ୟ
4. ଆକାଶବାଣୀ

Options :

485584146473. 1
485584146474. 2
485584146475. 3
485584146476. 4

Question Number : 235 Question Id : 48558436620 Question Type : MCQ Option Shuffling : No Is Question Mandatory : No Calculator : None Response Time : N.A Think Time : N.A Minimum Instruction Time : 0

Correct Marks : 5 Wrong Marks : 1

Question Key Details :

Key	Value
Comprehension	MCQ

Literary devices such as simile and metaphor are used in which of the following?

1. Prose
2. Poetry
3. Grammar
4. Drama

Options :

485584146477. 1
485584146478. 2
485584146479. 3
485584146480. 4

Question Number : 235 Question Id : 48558436620 Question Type : MCQ Option Shuffling : No Is Question Mandatory : No Calculator : None Response Time : N.A Think Time : N.A Minimum Instruction Time : 0

Correct Marks : 5 Wrong Marks : 1

Question Key Details :

Key	Value
Comprehension	MCQ

ସାଦୃଶ୍ୟ ପ୍ରଶାଳନା ଯଥା ବିନାଛନ୍ଦ ଓ ମେତାଫର ନିମ୍ନୋକ୍ତ ମଧ୍ୟରୁ କେଉଁଟି ବ୍ୟବହାର କରାଯାଏ

1. ପ୍ରବନ୍ଧ
2. କବିତା
3. ବ୍ଯାକରଣ
4. ଅଭିନୟ

Options :

485584146477. 1
485584146478. 2
485584146479. 3
485584146480. 4

Question Number : 236 Question Id : 48558436621 Question Type : MCQ Option Shuffling : No Is Question Mandatory : No Calculator : None Response Time : N.A Think Time : N.A Minimum Instruction Time : 0

Correct Marks : 5 Wrong Marks : 1

Question Key Details :

Key	Value
Comprehension	MCQ

'Man is a born child, his power is the power of growth.'

What is the meaning of this sentence?

1. Humans should remain stagnant
2. Humans should refrain from adding to sources of knowledge
3. Intellectual and cognitive regression are important characteristics of humans
4. Intellectual and cognitive development are important characteristics of human.

Options :

485584146481. 1
485584146482. 2
485584146483. 3
485584146484. 4

Question Number : 236 Question Id : 48558436621 Question Type : MCQ Option Shuffling : No Is Question Mandatory : No Calculator : None Response Time : N.A Think Time : N.A Minimum Instruction Time : 0

Correct Marks : 5 Wrong Marks : 1

Question Key Details :

Key	Value
Comprehension	MCQ

'ମନୁଷ୍ୟ ଶହଜାତି କରୁ ବଡ଼ ଶିଶୁ ଯାହାର ଶକ୍ତି ବୃଦ୍ଧିର ଶକ୍ତି'

ଏହି ବାକ୍ୟଟିର ଅର୍ଥ କଣ

1. ମଣିଷ ଶିଶୁ ଗଢ଼ିବା ଉଚିତ
2. ମଣିଷ ବିଭିନ୍ନ ଜ୍ଞାନ ଉପାର୍ଜନରୁ ମୁକ୍ତ ପାଇବା ଉଚିତ
3. ଶକ୍ତି ଓ ମାନସିକ ଶକ୍ତି ମଣିଷର ଏକ ସ୍ୱଭାବଗୁଣ
4. ଶକ୍ତି ଓ ମାନସିକ ବିକାଶ ମଣିଷର ଏକ ସ୍ୱଭାବଗୁଣ

Options :

485584146481. 1
485584146482. 2
485584146483. 3
485584146484. 4

Question Number : 237 Question Id : 48558436622 Question Type : MCQ Option Shuffling : No Is Question Mandatory : No Calculator : None Response Time : N.A Think Time : N.A Minimum Instruction Time : 0

Correct Marks : 5 Wrong Marks : 1

Question Key Details :

Key	Value
Comprehension	MCQ

The Booker Prize 2022 was awarded to which Indian novel?

1. The Alchemist
2. A Tomb of Sand
3. Train to Pakistan
4. One Hundred Years of Solitude

Options :

485584146485. 1
485584146486. 2
485584146487. 3
485584146488. 4

Question Number : 237 Question Id : 48558436622 Question Type : MCQ Option Shuffling : No Is Question Mandatory : No Calculator : None Response Time : N.A Think Time : N.A Minimum Instruction Time : 0

Correct Marks : 5 Wrong Marks : 1

Question Key Details :

Key	Value
Comprehension	MCQ

ଭାରତର ବେର୍ଡ଼ ଉପନାମ 'ବୁକର ପ୍ରାଇଜ 2022'ରେ ପୁରସ୍କୃତ ହୋଇଛି ?

1. ଦି ଅଲକେମିଷ୍ଟ
2. ଏ ଟମ୍ବ ଅଫ୍ ସାଣ୍ଡ
3. ଟ୍ରେନ୍ ଟୁ ପାକିସ୍ତାନ
4. ଓନ୍ ହଣ୍ଡ୍ରେଡ୍ ଇୟର୍ସ ଅଫ୍ ସୋଲିଚ୍ୟୁଡ୍

Options :

485584146485. 1
485584146486. 2
485584146487. 3
485584146488. 4

Question Number : 238 Question Id : 48558436623 Question Type : MCQ Option Shuffling : No Is Question Mandatory : No Calculator : None Response Time : N.A Think Time : N.A Minimum Instruction Time : 0

Correct Marks : 5 Wrong Marks : 1

Question Key Details :

Key	Value
Comprehension	MCQ

What are the challenges faced by students while learning English in India?

- A. Lack of trained teachers
- B. Lack of an enabling language environment
- C. Rote memorisation of poems
- D. Objective way of testing language skills
- E. Lack of proper teaching - learning materials

Choose the correct answer from the options given below:

- 1. A, B, C only
- 2. B, C, D only
- 3. A, B, C, D only
- 4. A, B, C, D and E

Options :

- 485584146489. 1
- 485584146490. 2
- 485584146491. 3
- 485584146492. 4

Question Number : 238 Question Id : 48558436623 Question Type : MCQ Option Shuffling : No Is Question Mandatory : No Calculator : None Response Time : N.A Think Time : N.A Minimum Instruction Time : 0

Correct Marks : 5 Wrong Marks : 1

Question Key Details :

Key	Value
Comprehension	MCQ

ଭାରତରେ କଂଚାକା ଶିକ୍ଷଣ ସମୟରେ ଛାତ୍ରଛାତ୍ରୀ ମାନେ କେଉଁ ଦିଗରେ ସମ୍ବୁଦ୍ଧି ଅଭାବି ?

- A. ପ୍ରଶିକ୍ଷଣ ଶିକ୍ଷକର ଅଭାବ
- B. ପ୍ରତିକୂଳ ଭାଷା ପରିବେଶର ସମସ୍ୟା
- C. କବିତାକୁ ଯୋଡିବା ବିଦ୍ୟା
- D. ଭାଷା ଦକ୍ଷତା ପରୀକ୍ଷଣ ମାର୍ଗର ଅସମ୍ଭବତା
- E. ଭିନ୍ନ ଶିକ୍ଷାଦାନ ଓ ଗ୍ରହଣର ଅବସରର ଅଭାବ

ବିଆପାରଣ୍ଡୁରା ବିକଳରୁ ସଠିକ୍ ଉତ୍ତରଟି ଚାହୁଁ:

- 1. A, B, C କେବଳ
- 2. B, C, D କେବଳ
- 3. A, B, C, D କେବଳ
- 4. A, B, C, D ଓ E

Options :

485584146489. 1
485584146490. 2
485584146491. 3
485584146492. 4

Question Number : 239 Question Id : 48558436624 Question Type : MCQ Option Shuffling : No Is Question Mandatory : No Calculator : None Response Time : N.A Think Time : N.A Minimum Instruction Time : 0

Correct Marks : 5 Wrong Marks : 1

Question Key Details :

Key	Value
Comprehension	MCQ

What is a biography?

1. An account of a person written by oneself.
2. An account of a person written by others.
3. A book of biology.
4. A historical account.

Options :

485584146493. 1
485584146494. 2
485584146495. 3
485584146496. 4

Question Number : 239 Question Id : 48558436624 Question Type : MCQ Option Shuffling : No Is Question Mandatory : No Calculator : None Response Time : N.A Think Time : N.A Minimum Instruction Time : 0

Correct Marks : 5 Wrong Marks : 1

Question Key Details :

Key	Value
Comprehension	MCQ

ଜୀବନୀ କଣ?

1. ଗୋଟିଏ ବ୍ୟକ୍ତି ବିଷୟରେ ଅନ୍ୟକଣେ ଲେଖିବା
2. କଣେ ବ୍ୟକ୍ତି ବିଷୟରେ ଅନ୍ୟ ଦ୍ୱାରା ଲେଖାଯିବା
3. ଆତ୍ମଜୀବନୀ
4. ଐତିହାସିକ ବିଷୟାଚିତ

Options :

485584146493. 1
485584146494. 2
485584146495. 3
485584146496. 4

Question Number : 240 Question Id : 48558436625 Question Type : MCQ Option Shuffling : No Is Question Mandatory :

No Calculator : None Response Time : N.A Think Time : N.A Minimum Instruction Time : 0

Correct Marks : 5 Wrong Marks : 1

Question Key Details :

Key	Value
Comprehension	MCQ

How can grammar books be modified to minimise the difficulties learners face while learning grammar?

- A. By teaching grammar in context
- B. By including pictures and illustrations
- C. By giving more practice and examples
- D. By focusing only on the rules
- E. By translating in different languages

Choose the correct answer from the options given below:

- 1. A, B, C only
- 2. A, D, E only
- 3. C, D, E only
- 4. B, C, D only

Options :

485584146497. 1

485584146498. 2

485584146499. 3

485584146500. 4

Question Number : 240 Question Id : 48558436625 Question Type : MCQ Option Shuffling : No Is Question Mandatory :

No Calculator : None Response Time : N.A Think Time : N.A Minimum Instruction Time : 0

Correct Marks : 5 Wrong Marks : 1

Question Key Details :

Key	Value
Comprehension	MCQ

ବ୍ୟାକରଣ ବହିର କିପରି ପୁନର୍ଗଠିତ ହେବା ସରଳର ଯାହା ପାଠକର ଛଦୁଛାହା ମାନକର ସମସ୍ୟା କମ୍ ହୋଇଯିବ?

- A. ବ୍ୟାକରଣ ଶିକ୍ଷାଦାନର ବିଷୟବସ୍ତୁ ଆଧାରିତ
- B. କୃତ୍ରି ଓ ପ୍ରତିଛବି ଦେଖାଇ
- C. ଅତ୍ୟଧିକ ଅଭ୍ୟାସ ଓ ଜବାହରଣର ମାଧ୍ୟମ
- D. ଶାସ୍ତ୍ର ପଦ୍ଧତିକୁ ପ୍ରାଧାନ୍ୟ ଦେଇ
- E. ବିଭିନ୍ନ ଭାଷାରେ ପ୍ରତିପଦିତ କରାଇ

କିଆସାଧାରଣ ବିକଳରୁ ଯଠିକ ଉତ୍ତରଟି ଚାହନ୍ତୁ:

- 1. A, B, C କେବଳ
- 2. A, D, E କେବଳ
- 3. C, D, E କେବଳ
- 4. B, C, D କେବଳ

Options :

- 485584146497. 1
- 485584146498. 2
- 485584146499. 3
- 485584146500. 4

Sub-Section Number :

2

Sub-Section Id :

4855842703

Question Shuffling Allowed :

No

Is Section Default? :

null

Question Number : 241 Question Id : 48558436626 Question Type : MCQ Option Shuffling : No Is Question Mandatory : No Calculator : None Response Time : N.A Think Time : N.A Minimum Instruction Time : 0

Correct Marks : 5 Wrong Marks : 1

Question Key Details :

Key	Value
Comprehension	Compl

At the upper primary level, the emphasis is on engaging the learner in learning principles of science through familiar experiences, working with hands to design simple technological units and modules and continuing to learn more on environment and health through activities and surveys.

As a science teacher, you will agree that scientific concepts are learnt better if learners explore them through activities and experiments. Learners should be given opportunity to explore science in their everyday experiences. You should engage learners (preferably in groups) in meaningful investigations - particularly of the problems they perceive to be significant and important.

As a science teacher, you should encourage discussions with the teacher and peers. You can ask your learners to gather information from newspapers, knowledgeable persons in the neighborhood, and from easily available sources and discuss about them in class with peers and teachers.

Role play, skits, cooperative learning strategies should be adopted to ensure larger participation and sharing of learning outcomes. It is advised that biographical narratives of scientists and inventors can be used. You should keep in mind that efforts should be continued for development of the process skills of science.

In order to explore the orbits and distribution of electrons in orbits, which could be the most appropriate teaching strategy/method?

1. Lecture
2. Demonstration
3. Brain-storming followed by exercise
4. Numerical Practice

Options :

- 485584146501. 1
- 485584146502. 2
- 485584146503. 3
- 485584146504. 4

Question Number : 241 Question Id : 48558436626 Question Type : MCQ Option Shuffling : No Is Question Mandatory : No Calculator : None Response Time : N.A Think Time : N.A Minimum Instruction Time : 0

Correct Marks : 5 Wrong Marks : 1

Question Key Details :

Key	Value
Comprehension	Comp1

ଅନୁଲୋଚନାକୁ ପଢ଼ି ଯଥାର୍ଥ ଭରଣ ଦିଅ:

ଭଜ ପ୍ରାଥମିକ ବିଦ୍ୟାଳୟରେ ଛତ୍ରଛାତ୍ରୀ ମାନଙ୍କୁ ନିୟୋଜିତ କରିବା ପାଇଁ ସେତେ ଶିକ୍ଷଣ ଅର୍ଗାନ୍‌ଜିଜ ମାନିବାକୁ ପଡ଼େ ନିଜର ଜଣାଶୁଣା ଅନୁଭୂତିକୁ ନେଇ, ସାଧାରଣ ବୈଷୟିକ ଇତିହାସ ଭିତରେ ଯାତ ମିଳାଇ ଜାମ କରିବା ଓ ମତ୍ୟୁରା ସବୁ କରିବା । ଏତଦ ବ୍ୟତୀତ ପରିବେଶରେ ଶିଶୁର ସ୍ୱାସ୍ଥ୍ୟ ଜନିତ ପ୍ରକ୍ରିୟା ସଂଚାଳନ ଓ ସର୍ତ୍ତେ କରିବା ।

ଗୋଟିଏ ବିଜ୍ଞାନ ଶିକ୍ଷକ ହିସାବରେ ବୈଜ୍ଞାନିକ ଧାରଣା ଓ ତାର ପରୀକ୍ଷଣ ପ୍ରକ୍ରିୟା ମାଧ୍ୟମରେ ପ୍ରଶିକ୍ଷଣକୁ ପ୍ରସଣ କରିବାକୁ ହୁଏ । ଶିକ୍ଷାର୍ଥୀ ମାନଙ୍କୁ ତାଙ୍କର ପ୍ରତ୍ୟେକ ଦିନର ଅନୁଭୂତିକୁ ପରିଚାଳନା କରିବା ପାଇଁ ସୂଯୋଗ ବିଧାୟାଏ ତୁମେ ଶିକ୍ଷାର୍ଥୀ ମାନଙ୍କୁ ଗୋଟିଏ ଅର୍ଥ ପୂର୍ଣ୍ଣ ଉଦ୍ଦେଶ୍ୟରେ ନିୟୋଜିତ କରିବା ଭବିତ । (ପ୍ରିଫରେନ୍ସୁଲ ସମ ମଧ୍ୟରେ) ବିଶିଷ୍ଟ ସମସ୍ୟାକୁ ନେଇ ସେମାନେ ଗୁରୁତ୍ୱ ଓ ଭବେଶ୍ୟକୁ ପ୍ରସଣ କରିପାରିବେ ।

ଜଣେ ବିଜ୍ଞାନ ଶିକ୍ଷକ ହିସାବରେ ତୁମେ ଶିକ୍ଷକ ଓ ସାମାୟାୟ ସବୁ ଆଲୋଚନାକୁ ଉତ୍ସାହିତ କରିବା ଭବିତ ତୁମେ ତୁମ ଶିକ୍ଷାର୍ଥୀ ମାନଙ୍କୁ ସମ୍ଭାବ ପତ୍ର ଏକତ୍ରିତ କରି ସୂଚନା ଭାଣିବା, ଯଦି ପଢ଼ିବାରୁ ଜ୍ଞାନୀ ଲୋକଙ୍କ ଗୁରୁଜ୍ଞାନ ଆହରଣ କରିବା ସହଜ ଉପାୟରେ ଜ୍ଞାନ ଉପାଚନ କରିବା ଓ ଶ୍ରେଣୀ ଗୁହରେ ପରସ୍ପରକୁ ଆଲୋଚନା କରିବା ବିଶେଷ କରି ସାଜ ସାଧୁ ଓ ଶିକ୍ଷକ ମଧ୍ୟରେ ବିଶେଷ କରି ଏହି ସବୁ ପ୍ରଣାଳୀକୁ ଜସାହିତ କରିବା ।

ଆବର୍ତ୍ତର ପ୍ରତିମୂର୍ତ୍ତି, ଭିଜ, ସହାୟକ ଶିକ୍ଷଣ ପ୍ରଣାଳୀକୁ ନିସିତ ଭାବରେ ସହୁତ ତଣ ଯୋଗ ଦେବା ଓ ତାଙ୍କ ଶିକ୍ଷଣକୁ ପରସ୍ପର ମଧ୍ୟରେ ବାଣିକ ପଦ୍ଧତିକୁ ପ୍ରସଣ କରାଯାଏ । ଏହା ପରାମର୍ଶ ଭବିତ ଯେ, ବୈଜ୍ଞାନିକ ଭିତରେ ଜୀବନକୁ ବ୍ୟାଖ୍ୟା କରିବା ଓ ଆବଶ୍ୟରକ ମାନେ ବ୍ୟବହାର ହୁଅନ୍ତି । ତୁମେ ତୁମ ମନରେ ଏହା ସିର କରିବା ଭବିତ ଯେ, ଆମର ଦକ୍ଷତାକୁ ଆମେ ବିଜ୍ଞାନ ଭିତରେ ରହିଯାଇ ଦକ୍ଷତାରେ ବିକଶିତ କରିବା ଭବିତ ।

ନିମ୍ନୋକ୍ତ ମଧ୍ୟରୁ କେଉଁଟି ଭବିତ ଶିକ୍ଷଣୀୟ ପ୍ରଣାଳୀ?

- 1. ଅଧ୍ୟାପନା
- 2. ପରୀକ୍ଷକ
- 3. ମଣ୍ଡିତ ବ୍ୟବହାରକରି ପଢ଼ାଉଥିବା ଅଭ୍ୟାସ
- 4. ସାଂସ୍କୃକ ଆରାସ

Options :

- 485584146501. 1
- 485584146502. 2
- 485584146503. 3
- 485584146504. 4

Question Number : 242 Question Id : 48558436627 Question Type : MCQ Option Shuffling : No Is Question Mandatory : No Calculator : None Response Time : N.A Think Time : N.A Minimum Instruction Time : 0 Correct Marks : 5 Wrong Marks : 1

Question Key Details :

Key	Value
Comprehension	Comp1

At the upper primary level, the emphasis is on engaging the learner in learning principles of science through familiar experiences, working with hands to design simple technological units and modules and continuing to learn more on environment and health through activities and surveys.

As a science teacher, you will agree that scientific concepts are learnt better if learners explore them through activities and experiments. Learners should be given opportunity to explore science in their everyday experiences. You should engage learners (preferably in groups) in meaningful investigations - particularly of the problems they perceive to be significant and important.

As a science teacher, you should encourage discussions with the teacher and peers. You can ask your learners to gather information from newspapers, knowledgeable persons in the neighborhood, and from easily available sources and discuss about them in class with peers and teachers.

Role play, skits, cooperative learning strategies should be adopted to ensure larger participation and sharing of learning outcomes. It is advised that biographical narratives of scientists and inventors can be used. You should keep in mind that efforts should be continued for development of the process skills of science.

Which would be the most appropriate teaching learning material to explain different types of atomic models?

1. Charts
2. Pictures
3. Video animation
4. Black board

Options :

- 485584146505. 1
- 485584146506. 2
- 485584146507. 3
- 485584146508. 4

Question Number : 242 Question Id : 48558436627 Question Type : MCQ Option Shuffling : No Is Question Mandatory : No Calculator : None Response Time : N.A Think Time : N.A Minimum Instruction Time : 0

Correct Marks : 5 Wrong Marks : 1

Question Key Details :

Key	Value
Comprehension	Comp1

ଅନୁଲୋଚନାକୁ ପଢ଼ି ଯଥାର୍ଥ ଭରଭ ଦିଅ:

ଉଚ୍ଚ ପ୍ରାଥମିକ ବିଦ୍ୟାଳୟରେ ଛତ୍ରଛାତ୍ରୀ ମାନଙ୍କୁ ନିୟୋଜିତ କରିବା ପାଇଁ ସେଲେ ଶିକ୍ଷଣ ଅର୍ଗାନାଇଜେସନ ମାନିବାକୁ ପଡ଼େ ନିଜର ଜଣାଶୁଣା ଅନୁଲୋଚନା ଲେଖିବା । ସାଧାରଣ ବୈଷୟିକ ଉଦ୍ଦେଶ୍ୟ ଭିତରେ ଯାତ ମିଳାଇ ଜାମ କରିବା ଓ ମତ୍ୟୁକ ସବୁ କରିବା । ଏତଦ ବ୍ୟତୀତ ପରିବେଶରେ ଶିଶୁର ସ୍ୱାସ୍ଥ୍ୟ ଜନିତ ପ୍ରକ୍ରିୟା ସଂଚାଳନ ଓ ସର୍ତ୍ତ କରିବା ।

ଗୋଟିଏ ବିଜ୍ଞାନ ଶିକ୍ଷକ ହିସାବରେ ବୈଜ୍ଞାନିକ ଧାରଣା ଓ ତାର ପରୀକ୍ଷଣ ପ୍ରକ୍ରିୟା ମାଧ୍ୟମରେ ପ୍ରଶିକ୍ଷଣକୁ ପ୍ରସ୍ତୁତ କରିବାକୁ ହୁଏ । ଶିକ୍ଷାର୍ଥୀ ମାନଙ୍କୁ ତାଙ୍କର ପ୍ରତ୍ୟେକ ଦିନର ଅନୁଲୋଚନା ପରିଚାଳନା କରିବା ପାଇଁ ସୂଯୋଗ ବିଧାୟକ ତୁମେ ଶିକ୍ଷାର୍ଥୀ ମାନଙ୍କୁ ଗୋଟିଏ ଅର୍ଥ ପୂର୍ଣ୍ଣ ଉଦ୍ଦେଶ୍ୟରେ ନିୟୋଜିତ କରିବା ଭବିତ । (ପ୍ରଫରେସରଙ୍କ ଦଳ ମଧ୍ୟରେ) ବିଶିଷ୍ଟ ସମସ୍ୟାକୁ ଲେଖା ସେମାନେ ଗୁରୁତ୍ୱ ଓ ଭବିଷ୍ୟତକୁ ପ୍ରସ୍ତୁତ କରିପାରିବେ ।

ଉଚ୍ଚ ବିଜ୍ଞାନ ଶିକ୍ଷକ ହିସାବରେ ତୁମେ ଶିକ୍ଷକ ଓ ସାମାଜିକ ସବୁ ଆଲୋଚନାକୁ ଉତ୍ତର କରିବା ଭବିତ ତୁମେ ତୁମ ଶିକ୍ଷାର୍ଥୀ ମାନଙ୍କୁ ସମ୍ଭାବ ପତ୍ର ଏକତ୍ରିତ କରି ସୂଚନା ଭାଣିବା, ଯଦି ପଢ଼ିଲାରୁ ଜ୍ଞାନୀ ଲୋକଙ୍କ ଗୁରୁଜ୍ଞାନ ଆହରଣ କରିବା ସହଜ ଉପାୟରେ ଜ୍ଞାନ ଉପାଦାନ କରିବା ଓ ଶ୍ରେଣୀ ସୂତ୍ରରେ ପରସ୍ପରକୁ ଆଲୋଚନା କରିବା ବିଶେଷ କରି ସାଜ ସାଧୁ ଓ ଶିକ୍ଷକ ମଧ୍ୟରେ ବିଶେଷ କରି ଏହି ସବୁ ପ୍ରଣାଳୀକୁ ଜଞ୍ଜାସିତ କରିବା ।

ଆବର୍ତ୍ତର ପ୍ରତିମୂର୍ତ୍ତି, ଭିଜ, ସହାୟକ ଶିକ୍ଷଣ ପ୍ରଣାଳୀକୁ ନିସିତ ଭାବରେ ସହୁତ ତଣ ଯୋଗ ଦେବା ଓ ତାଙ୍କ ଶିକ୍ଷଣକୁ ପରସ୍ପର ମଧ୍ୟରେ ବାଣିକ ପଦ୍ଧତିକୁ ପ୍ରସ୍ତୁତ କରାଯାଏ । ଏହା ପରାମର୍ଶ ଭବିତ ଯେ, ବୈଜ୍ଞାନିକ ଭିତରେ ଜୀବନକୁ ବ୍ୟାଖ୍ୟା କରିବା ଓ ଆବଶ୍ୟକ ମାନେ ବ୍ୟବହାର ହୁଅନ୍ତି । ତୁମେ ତୁମ ମନରେ ଏହା ସିର କରିବା ଭବିତ ଯେ, ଆମର ଦକ୍ଷତାକୁ ଆମେ ବିଜ୍ଞାନ ଭିତରେ ଉଦ୍ଦିପାଳ ଦକ୍ଷତାରେ ବିକଶିତ କରିବା ଭବିତ ।

ବିଭିନ୍ନ ପ୍ରକାର ଆବେଗିକ ମତେଲକୁ ବ୍ୟାଖ୍ୟା କରିବା ପାଇଁ ନିମ୍ନୋକ୍ତ ବେର୍ତ୍ତ ଶିକ୍ଷଣ ପ୍ରଣାଳୀ ସୂଚିପୁତ୍ର ଅଟେ?

- 1. ବାଟ
- 2. ବିତ୍ର
- 3. ଗିତିଓ ଆନିମେଟର
- 4. କଳାପତା

Options :

- 485584146505. 1
- 485584146506. 2
- 485584146507. 3
- 485584146508. 4

Question Number : 243 Question Id : 48558436628 Question Type : MCQ Option Shuffling : No Is Question Mandatory : No Calculator : None Response Time : N.A Think Time : N.A Minimum Instruction Time : 0

Correct Marks : 5 Wrong Marks : 1

Question Key Details :

Key	Value
Comprehension	Comp1

At the upper primary level, the emphasis is on engaging the learner in learning principles of science through familiar experiences, working with hands to design simple technological units and modules and continuing to learn more on environment and health through activities and surveys.

As a science teacher, you will agree that scientific concepts are learnt better if learners explore them through activities and experiments. Learners should be given opportunity to explore science in their everyday experiences. You should engage learners (preferably in groups) in meaningful investigations - particularly of the problems they perceive to be significant and important.

As a science teacher, you should encourage discussions with the teacher and peers. You can ask your learners to gather information from newspapers, knowledgeable persons in the neighborhood, and from easily available sources and discuss about them in class with peers and teachers.

Role play, skits, cooperative learning strategies should be adopted to ensure larger participation and sharing of learning outcomes. It is advised that biographical narratives of scientists and inventors can be used. You should keep in mind that efforts should be continued for development of the process skills of science.

If a teacher is teaching types of sub-atomic particles and their charges, which could be the most appropriate tool for assesment?

1. Unit tests
2. Oral test
3. A field project
4. Crossword puzzle

Options :

- 485584146509. 1
- 485584146510. 2
- 485584146511. 3
- 485584146512. 4

Question Number : 243 Question Id : 48558436628 Question Type : MCQ Option Shuffling : No Is Question Mandatory : No Calculator : None Response Time : N.A Think Time : N.A Minimum Instruction Time : 0

Correct Marks : 5 Wrong Marks : 1

Question Key Details :

Key	Value
Comprehension	Compl

ଅନୁଲୋଚନାକୁ ପଢ଼ି ଯଥାର୍ଥ ଭରଭ ଦିଅ:

ଭଜ ପ୍ରାଥମିକ ବିଦ୍ୟାଳୟରେ ଛତ୍ରଛାତ୍ରୀ ମାନଙ୍କୁ ନିୟୋଜିତ କରିବା ପାଇଁ ସେତେ ଶିକ୍ଷଣ ଅର୍ଗାନାଇଜେସନ ମାନିବାକୁ ପଡ଼େ ନିଜର ଜଣାଶୁଣା ଅନୁଲୋଚନାକୁ ନେଇ. ସାଧାରଣ ବୈଷୟିକ ଗଠନିକ ଭିତରେ ଯାତ ମିଳାଇ ଜାମ କରିବା ଓ ମତ୍ୟୁଗ ସବୁ କରିବା । ଏତଦ ବ୍ୟତୀତ ପରିବେଶରେ ଶିଶୁର ସ୍ୱାସ୍ଥ୍ୟ ଜନିତ ପ୍ରକ୍ରିୟା ସଂଚାଳନ ଓ ସର୍ତ୍ତେ କରିବା ।

ଗୋଟିଏ ବିଜ୍ଞାନ ଶିକ୍ଷକ ହିସାବରେ ବୈଜ୍ଞାନିକ ଧାରଣା ଓ ତାର ପରୀକ୍ଷଣ ପ୍ରକ୍ରିୟା ମାଧ୍ୟମରେ ପ୍ରଶିକ୍ଷଣକୁ ପ୍ରସଣ କରିବାକୁ ହୁଏ । ଶିକ୍ଷାର୍ଥୀ ମାନଙ୍କୁ ତାଙ୍କର ପ୍ରତ୍ୟେକ ଦିନର ଅନୁଲୋଚନାକୁ ପରିଚାଳନା କରିବା ପାଇଁ ସୁଯୋଗ ଦିଆଯାଏ ତୁମେ ଶିକ୍ଷାର୍ଥୀ ମାନଙ୍କୁ ଗୋଟିଏ ଅର୍ଥ ପୂର୍ଣ୍ଣ ଉଦ୍ଦେଶ୍ୟରେ ନିୟୋଜିତ କରିବା ଭବିତ । (ପ୍ରିଫରେନ୍ସୁଲ ସମ ମଧ୍ୟରେ) ଜିଦିଷ୍ଟ ସମସ୍ୟାକୁ ନେଇ ସେମାନେ ଗୁରୁତ୍ୱ ଓ ଭବେଶ୍ୟକୁ ପ୍ରସଣ କରିପାରିବେ ।

ଜଣେ ବିଜ୍ଞାନ ଶିକ୍ଷକ ହିସାବରେ ତୁମେ ଶିକ୍ଷକ ଓ ସାଙ୍ଗସାଥୀ ସବୁ ଆଲୋଚନାକୁ ଉତ୍ସାହିତ କରିବା ଭବିତ ତୁମେ ତୁମ ଶିକ୍ଷାର୍ଥୀ ମାନଙ୍କୁ ସମ୍ଭାବ ପତ୍ର ଏକତ୍ରିତ କରି ସୂଚନା ଭାଣିବା, ଯଦି ପଢ଼ିପାରୁ ଜ୍ଞାନୀ ଲୋକଙ୍କ ଗୁରୁଜ୍ଞାନ ଆହରଣ କରିବା ସହଜ ଉପାୟରେ ଜ୍ଞାନ ଉପାଦାନ କରିବା ଓ ଶ୍ରେଣୀ ସୂତ୍ରରେ ପରସ୍ପରକୁ ଆଲୋଚନା କରିବା ବିଶେଷ କରି ସାଙ୍ଗ ସାଥୀ ଓ ଶିକ୍ଷକ ମଧ୍ୟରେ ବିଶେଷ କରି ଏହି ସବୁ ପ୍ରଣାଳୀକୁ ଜସାହିତ କରିବା ।

ଆବର୍ତ୍ତର ପ୍ରତିମୂର୍ତ୍ତି, ଭିଜ, ସହାୟକ ଶିକ୍ଷଣ ପ୍ରଣାଳୀକୁ ନିସିତ ଭାବରେ ସହୁତ ତଣ ଯୋଗ ଦେବା ଓ ତାଙ୍କ ଶିକ୍ଷଣକୁ ପରସ୍ପର ମଧ୍ୟରେ ବାଣିକ ପଦ୍ଧତିକୁ ପ୍ରସଣ କରାଯାଏ । ଏହା ପରାମର୍ଶ ଭବିତ ଯେ, ବୈଜ୍ଞାନିକ ଭିତରେ ଜୀବନକୁ ବ୍ୟାଖ୍ୟା କରିବା ଓ ଆବଶ୍ୟକ ମାନେ ବ୍ୟବହାର ହୁଅନ୍ତି । ତୁମେ ତୁମ ମନରେ ଏହା ସିର କରିବା ଭବିତ ଯେ, ଆମର ଦକ୍ଷତାକୁ ଆମେ ବିଜ୍ଞାନ ଭିତରେ ଉଦିପାଳ ଦକ୍ଷତାରେ ବିକଶିତ କରିବା ଭବିତ ।

ଗୋଟିଏ ଶିକ୍ଷକ ଯଦି "ସବ ଆଗେନିକ" ଶିକ୍ଷଣ ପ୍ରଣାଳୀ ଆପଣାଏ ତାହାଲେ ନିମ୍ନୋକ୍ତ କୌଣସି ପରୀକ୍ଷଣ ମାନଙ୍କ ମଧ୍ୟରୁ କେଉଁଟି ଠିକ?

- 1. ଆଂଶିକ ପରୀକ୍ଷା
- 2. ମୌଖିକ ପରୀକ୍ଷା
- 3. ଶେତ୍ରପ୍ରକଳ୍ପ
- 4. ଜୁସଖାର୍ ପକଳ

Options :

- 485584146509. 1
- 485584146510. 2
- 485584146511. 3
- 485584146512. 4

Question Number : 244 Question Id : 48558436629 Question Type : MCQ Option Shuffling : No Is Question Mandatory : No Calculator : None Response Time : N.A Think Time : N.A Minimum Instruction Time : 0 Correct Marks : 5 Wrong Marks : 1

Question Key Details :

Key	Value
Comprehension	Comp1

At the upper primary level, the emphasis is on engaging the learner in learning principles of science through familiar experiences, working with hands to design simple technological units and modules and continuing to learn more on environment and health through activities and surveys.

As a science teacher, you will agree that scientific concepts are learnt better if learners explore them through activities and experiments. Learners should be given opportunity to explore science in their everyday experiences. You should engage learners (preferably in groups) in meaningful investigations - particularly of the problems they perceive to be significant and important.

As a science teacher, you should encourage discussions with the teacher and peers. You can ask your learners to gather information from newspapers, knowledgeable persons in the neighborhood, and from easily available sources and discuss about them in class with peers and teachers.

Role play, skits, cooperative learning strategies should be adopted to ensure larger participation and sharing of learning outcomes. It is advised that biographical narratives of scientists and inventors can be used. You should keep in mind that efforts should be continued for development of the process skills of science.

Which among the following objectives belongs to 'creating' cognitive process domain?

1. making a simple torch
2. explaining how a bulb glows
3. selecting suitable cell for torch
4. Indicating direction of flow of currents

Options :

485584146513. 1

485584146514. 2

485584146515. 3

485584146516. 4

Question Number : 244 Question Id : 48558436629 Question Type : MCQ Option Shuffling : No Is Question Mandatory : No Calculator : None Response Time : N.A Think Time : N.A Minimum Instruction Time : 0

Correct Marks : 5 Wrong Marks : 1

Question Key Details :

Key	Value
Comprehension	Comp1

ଅନୁଲୋକନକୁ ପଢ଼ି ଯଥାର୍ଥ ଭରଭ ଦିଅ:

ଭଜ ପ୍ରାଥମିକ ବିଦ୍ୟାଳୟରେ ଛତ୍ରଛାତ୍ରୀ ମାନଙ୍କୁ ନିୟୋଜିତ କରିବା ପାଇଁ ସେତେ ଶିକ୍ଷଣ ଅର୍ଗାନ୍‌ଜିଜ ମାନିବାକୁ ପଡ଼େ ନିଜର ଜଣାଶୁଣା ଅନୁଭୂତିକୁ ନେଇ. ସାଧାରଣ ବୈଷୟିକ ଗଭନିଟ ଭିତରେ ଯାତ ମିଳାଇ ଜାମ କରିବା ଓ ମହୁ୍ୟତା ସବୁ କରିବା । ଏତଦ ବ୍ୟତୀତ ପରିବେଶରେ ଶିଶୁର ସ୍ୱାସ୍ଥ୍ୟ ଜନିତ ପ୍ରକ୍ରିୟା ସଂଚାଳନ ଓ ସର୍ଭେ କରିବା ।

ଗୋଟିଏ ବିଜ୍ଞାନ ଶିକ୍ଷକ ହିସାବରେ ବୈଜ୍ଞାନିକ ଧାରଣା ଓ ତାର ପରୀକ୍ଷଣ ପ୍ରକ୍ରିୟା ମାଧ୍ୟମରେ ପ୍ରଶିକ୍ଷଣକୁ ଗ୍ରହଣ କରିବାକୁ ହୁଏ । ଶିକ୍ଷାର୍ଥୀ ମାନଙ୍କୁ ତାଙ୍କର ପ୍ରତ୍ୟେକ ଦିନର ଅନୁଭୂତିକୁ ପରିଚାଳନା କରିବା ପାଇଁ ସୂଯୋଗ ବିଆଯାଏ ତୁମେ ଶିକ୍ଷାର୍ଥୀ ମାନଙ୍କୁ ଗୋଟିଏ ଅର୍ଥ ପୂର୍ଣ୍ଣ ଉଦ୍ଦେଶ୍ୟରେ ନିୟୋଜିତ କରିବା ଭଡ଼ିତ। (ପ୍ରିଫରେନ୍ସୁଲ ସକ ମଧ୍ୟରେ) ଜିଦିଷ୍ଟ ସମସ୍ୟାକୁ ନେଇ ସେମାନେ ଗୁରୁତ୍ୱ ଓ ଭବେଶ୍ୟକୁ ଗ୍ରହଣ କରିପାରିବେ ।

ଜଣେ ବିଜ୍ଞାନ ଶିକ୍ଷକ ହିସାବରେ ତୁମେ ଶିକ୍ଷକ ଓ ସାଜସାଧୁ ସବୁ ଆଲୋଚନାକୁ ଉତ୍ସାହିତ କରିବା ଭଡ଼ିତ ତୁମେ ତୁମ ଶିକ୍ଷାର୍ଥୀ ମାନଙ୍କୁ ସମ୍ଭାବ ପତ୍ର ଏକତ୍ରିତ କରି ସୂଚନା ଭାଣିବା, ଯଦି ପଢ଼ିକାରୁ ଜ୍ଞାନୀ ଲୋକଙ୍କ ଗୁରୁଜ୍ଞାନ ଆହରଣ କରିବା ସହଜ ଉପାୟରେ ଜ୍ଞାନ ଉପାଚନ କରିବା ଓ ଶ୍ରେଣୀ ସୂତ୍ରରେ ପରସ୍ପରକୁ ଆଲୋଚନା କରିବା ବିଶେଷ କରି ସାଜ ସାଧୁ ଓ ଶିକ୍ଷକ ମଧ୍ୟରେ ବିଶେଷ କରି ଏହି ସବୁ ପ୍ରଣାଳୀକୁ ଜସାହିତ କରିବା ।

ଆବର୍ତ୍ତର ପ୍ରତିମୂର୍ତ୍ତି, ଭିଜ, ସହାୟକ ଶିକ୍ଷଣ ପ୍ରଣାଳୀକୁ ନିସିତ ଭାବରେ ସହୁତ ତଣ ଯୋଗ ଦେବା ଓ ତାଙ୍କ ଶିକ୍ଷଣକୁ ପରସ୍ପର ମଧ୍ୟରେ ବାଣିବା ପଦ୍ଧତିକୁ ଗ୍ରହଣ କରାଯାଏ । ଏହା ପରାମର୍ଶ ଭଡ଼ିତ ଯେ, ବୈଜ୍ଞାନିକ ଭିତରେ ଜୀବନକୁ ବ୍ୟାଖ୍ୟା କରିବା ଓ ଆବଶ୍ୟରକ ମାନେ ବ୍ୟବହାର ହୁଅନ୍ତି । ତୁମେ ତୁମ ମନରେ ଏହା ସିର କରିବା ଭଡ଼ିତ ଯେ, ଆମର ଦକ୍ଷତାକୁ ଆମେ ବିଜ୍ଞାନ ଭିତରେ ଉଦିପାତ ଦକ୍ଷତାରେ ବିକଶିତ କରିବା ଭଡ଼ିତ ।

ନିମ୍ନୋକ୍ତ ମଧ୍ୟରୁ କେଉଁ ଭବେଶ୍ୟ ମାନସିକ ପ୍ରକ୍ରିୟା ତୋମେନର ସୃଷ୍ଟି କରିଥାଏ?

- 1. ସିଧା ସର୍ଣ କରିବା
- 2. କିପରି ଗୋଟିଏ ବକଟିଏ ଆଲୋକିତ ପଦ୍ଧତିକୁ ବାଖ୍ୟା କରିବା
- 3. ଠିକ ଲୋଶଟିଏ ଚୟନ କରିବା ପାଇଁ ସର୍ଣ କରିବା
- 4. ବିଦ୍ୟୁତ ପ୍ରୋତର ମାର୍ଗକୁ ସୂଚିତ କରିବା

Options :

- 485584146513. 1
- 485584146514. 2
- 485584146515. 3
- 485584146516. 4

Question Number : 245 Question Id : 48558436630 Question Type : MCQ Option Shuffling : No Is Question Mandatory : No Calculator : None Response Time : N.A Think Time : N.A Minimum Instruction Time : 0 Correct Marks : 5 Wrong Marks : 1

Question Key Details :

Key	Value
Comprehension	Comp1

At the upper primary level, the emphasis is on engaging the learner in learning principles of science through familiar experiences, working with hands to design simple technological units and modules and continuing to learn more on environment and health through activities and surveys.

As a science teacher, you will agree that scientific concepts are learnt better if learners explore them through activities and experiments. Learners should be given opportunity to explore science in their everyday experiences. You should engage learners (preferably in groups) in meaningful investigations - particularly of the problems they perceive to be significant and important.

As a science teacher, you should encourage discussions with the teacher and peers. You can ask your learners to gather information from newspapers, knowledgeable persons in the neighborhood, and from easily available sources and discuss about them in class with peers and teachers.

Role play, skits, cooperative learning strategies should be adopted to ensure larger participation and sharing of learning outcomes. It is advised that biographical narratives of scientists and inventors can be used. You should keep in mind that efforts should be continued for development of the process skills of science.

Which among the following is a teacher-centered objective?

1. Children identify different types of nutrition in plants.
2. Children explain various methods of getting nutrition in plants.
3. Teachers show images of autotrophic and heterotrophic nutrition
4. Teachers explain the definition of nutrition and make students memorize it.

Options :

485584146517. 1

485584146518. 2

485584146519. 3

485584146520. 4

Question Number : 245 Question Id : 48558436630 Question Type : MCQ Option Shuffling : No Is Question Mandatory : No Calculator : None Response Time : N.A Think Time : N.A Minimum Instruction Time : 0

Correct Marks : 5 Wrong Marks : 1

Question Key Details :

Key	Value
Comprehension	Comp1

ଅନୁଲେଖକଙ୍କୁ ପଢ଼ି ଯଥାର୍ଥ ଭରଭ ଦିଅ:

ଭଜ ପ୍ରାଥମିକ ବିଦ୍ୟାଳୟରେ ଛତ୍ରଛାତ୍ରୀ ମାନଙ୍କୁ ନିୟୋଜିତ କରିବା ପାଇଁ ହେଲେ ଶିକ୍ଷଣ ଅର୍ଗାନାଇଜିଜ ମାନିବାକୁ ପଡ଼େ ନିଜର ଜଣାଶୁଣା ଅନୁଭୂତିକୁ ନେଇ. ସାଧାରଣ ବୈଷୟିକ ଗଢ଼ନିକ ଭିତରେ ଯାତ ମିଳାଇ ଜାମ କରିବା ଓ ମହୁ୍ୟତା ସବୁ କରିବା । ଏତଦ ବ୍ୟତୀତ ପରିବେଶରେ ଶିଶୁର ସ୍ୱାସ୍ଥ୍ୟ ଜନିତ ପ୍ରକ୍ରିୟା ସଂଚାଳନ ଓ ସର୍ଭେ କରିବା ।

ଗୋଟିଏ ବିଜ୍ଞାନ ଶିକ୍ଷକ ହିସାବରେ ବୈଜ୍ଞାନିକ ଧାରଣା ଓ ତାର ପରୀକ୍ଷଣ ପ୍ରକ୍ରିୟା ମାଧ୍ୟମରେ ପ୍ରଶିକ୍ଷଣକୁ ଗ୍ରହଣ କରିବାକୁ ହୁଏ । ଶିକ୍ଷାର୍ଥୀ ମାନଙ୍କୁ ତାଙ୍କର ପ୍ରତ୍ୟେକ ଦିନର ଅନୁଭୂତିକୁ ପରିଚାଳନା କରିବା ପାଇଁ ସୂଯୋଗ ବିଆଯାଏ ତୁମେ ଶିକ୍ଷାର୍ଥୀ ମାନଙ୍କୁ ଗୋଟିଏ ଅର୍ଥ ପୂର୍ଣ୍ଣ ଉଦ୍ଦେଶ୍ୟରେ ନିୟୋଜିତ କରିବା ଭବିତ। (ପ୍ରିଫରେନ୍ସୁଲ ସକ ମଧ୍ୟରେ) ଜିଦିଷ୍ଟ ସମସ୍ୟାକୁ ନେଇ ସେମାନେ ଗୁରୁତ୍ୱ ଓ ଭବେଶ୍ୟକୁ ଗ୍ରହଣ କରିପାରିବେ ।

ଜଣେ ବିଜ୍ଞାନ ଶିକ୍ଷକ ହିସାବରେ ତୁମେ ଶିକ୍ଷକ ଓ ସାଜସାଧୁ ସବୁ ଆଲୋଚନାକୁ ଉତ୍ସାହିତ କରିବା ଭବିତ ତୁମେ ତୁମ ଶିକ୍ଷାର୍ଥୀ ମାନଙ୍କୁ ସମ୍ଭାବ ପତ୍ର ଏକତ୍ରିତ କରି ସୂଚନା ଭାଣିବା, ଯଦି ପଢ଼ିଶାଳୁ ଜ୍ଞାନୀ ଲୋକଙ୍କ ଗୁରୁଜ୍ଞାନ ଆହରଣ କରିବା ସହଜ ଉପାୟରେ ଜ୍ଞାନ ଉପାର୍ଜନ କରିବା ଓ ଶ୍ରେଣୀ ଗୁହରେ ପରସ୍ପରକୁ ଆଲୋଚନା କରିବା ବିଶେଷ କରି ସାଜ ସାଧୁ ଓ ଶିକ୍ଷକ ମଧ୍ୟରେ ବିଶେଷ କରି ଏହି ସବୁ ପ୍ରଣାଳୀକୁ ଜସାହିତ କରିବା ।

ଆବର୍ଜନ ପ୍ରତିମୂର୍ତ୍ତି, ଭିଜ, ସହାୟକ ଶିକ୍ଷଣ ପ୍ରଣାଳୀକୁ ନିସିତ ଭାବରେ ସହୁତ ତଣ ଯୋଗ ଦେବା ଓ ତାଙ୍କ ଶିକ୍ଷଣକୁ ପରସ୍ପର ମଧ୍ୟରେ ବାଣିକ ପଦ୍ଧତିକୁ ଗ୍ରହଣ କରାଯାଏ । ଏହା ପରାମର୍ଶ ଭବିତ ଯେ, ବୈଜ୍ଞାନିକ ଭିତରେ ଜୀବନକୁ ବ୍ୟାଖ୍ୟା କରିବା ଓ ଆବଶ୍ୟକ ମାନେ ବ୍ୟବହାର ହୁଅନ୍ତି । ତୁମେ ତୁମ ମନରେ ଏହା ସିର କରିବା ଭବିତ ଯେ, ଆମର ଦକ୍ଷତାକୁ ଆମେ ବିଜ୍ଞାନ ଭିତରେ ଉଦିପାଳ ଦକ୍ଷତାରେ ବିକଶିତ କରିବା ଭବିତ ।

ନିମ୍ନୋକ୍ତ ମଧ୍ୟରୁ କେଉଁଟି ଶିକ୍ଷକ ବେକ୍ତ୍ରିକ ଭବେଷ୍ୟ?

- 1. ଛତ୍ରଛାତ୍ରୀ ମାନେ ବିଭିନ୍ନ ପ୍ରକାର ଦୃକ୍ଷର ଗୁଣବତ୍ତାକୁ ବିହତ କରିବା
- 2. ଦୃକ୍ଷର ଗୁଣବତ୍ତାକୁ ଛାତ୍ରଛାତ୍ରୀମାନେ ବିଭିନ୍ନ ପ୍ରଣାଳୀରେ ବ୍ୟାଖ୍ୟା କରିବା
- 3. ଶିକ୍ଷକ 'ଅଟୋକ୍ରେଟିକ' ଓ 'ହେକ୍ରେଟିକ' ଗୁଣବତ୍ତାକୁ ଚିତ୍ର ମାଧ୍ୟମରେ ଦେଖାନ୍ତି
- 4. ଶିକ୍ଷକ ନିତଚେତ୍ରସନର ସଂଜ୍ଞାନିରୂପଣ କରନ୍ତି ଓ ଛାତ୍ରଛାତ୍ରୀ ମାନଙ୍କୁ ଘୋଷାଳା ଦିଅନ୍ତି

Options :

- 485584146517. 1
- 485584146518. 2
- 485584146519. 3
- 485584146520. 4

Sub-Section Number : 3
Sub-Section Id : 4855842704
Question Shuffling Allowed : No
Is Section Default? : null

Question Number : 246 **Question Id :** 48558436631 **Question Type :** MCQ **Option Shuffling :** No **Is Question Mandatory :** No **Calculator :** None **Response Time :** N.A **Think Time :** N.A **Minimum Instruction Time :** 0

Correct Marks : 5 **Wrong Marks :** 1

Question Key Details :

Key	Value
Comprehension	Comp2

The spider's web occupies a much larger space than does the animal itself. The web represents the spider's field of action in acting as a trap for insects. It is constructed according to a plan. A thread secreted by the spider joins two branches, two rocks, two supports of any kind; then he weaves the rays. The construction proceeds according to a plan. Finally the spider weaves the thread around the center, going around at an always very carefully calculated distance. If the points of support are close together, the web is small. The greater the distance of one from the other, the larger the web will be. But it will always be woven with the same exactness according to a precise plan.

As is the web, so is the mind of the child constructed according to an exact plan. The abstract construction enables him to grasp what happens in his field, which was out of his range heretofore.

Depending on whether the child lives in a simple civilisation or in a complicated world, his web will be more or less large and will enable him to attain more or fewer objectives.

This is why we must respect the interior construction and its manifestations, which may at times seem useless to us. The construction is necessary. It is thanks to this work that the child enlarges his psychic field and subsequently his receptive powers.

To consider the school as the place where instruction is given is one point of view. But to consider the school as a preparation for life is another. In the latter case the school must satisfy all the needs of life.

An education that suppresses the true nature of the child is an education that leads to the development of anomalies.

Scouting, which, outside of school, has brought an organised form of life to children, has therefore always interested us.

According to the passage, what is the significance of a spider's web to a child's education?

1. Education must be spread out in all domains.
2. Field-based learning is a crucial aspect of education.
3. The administrative web poses an impediment to education.
4. A child's mind is also constructed like a web.

Options :

- 485584146521. 1
- 485584146522. 2
- 485584146523. 3
- 485584146524. 4

Question Number : 246 Question Id : 48558436631 Question Type : MCQ Option Shuffling : No Is Question Mandatory : No Calculator : None Response Time : N.A Think Time : N.A Minimum Instruction Time : 0

Correct Marks : 5 Wrong Marks : 1

Question Key Details :

Key	Value
Comprehension	Comp2

ଅନୁଲେଖକଙ୍କୁ ପଢ଼ି ଯଥାର୍ଥ ଭାବେ ଦିଅ:

କୁଡ଼ିଆଣୀ ଜାଲ ଗୋଟିଏ ପଶୁ ଠାରୁ ମଧ୍ୟ ଚାଲିବା ଜାଣି ନେଇଥାଏ । ଏହି କୁଡ଼ିଆଣୀ ଜାଲଟି ଆମ ପାଖରେ ବହୁତ ବ୍ୟକ୍ତି ପରସ୍ପର ସଂଯୋଗିତ ହୋଇ ରହିବାର ସୁବିଧା ଦେଇଥାଏ । ଏହା ଗୋଟିଏ ସ୍ଥାନକୁ ନେଇ ଗଠନ ହୋଇଥାଏ । କୁଡ଼ିଆଣୀ ଜାଲଗୁଡ଼ାକ ପ୍ରତ୍ୟେକ ଧାଡ଼ି ଦୁଇଟି ପଥର ଦୁଇଟିକୁ ନିର୍ମିତ କରି ତିଆରି ହୋଇଥାଏ ତା' ପରେ ତା' ବେହରୁ ଗୋଟି ଦିଗରୁ ଚଳାଯାଇ ହୋଇଥାଏ । ଏହା ମଧ୍ୟ ଗୋଟିଏ ସ୍ଥାନକୁ ନେଇ ହୋଇଥାଏ । ଅର୍ଦ୍ଧଶତାବ୍ଦୀରେ କୁଡ଼ିଆଣୀ ଜାଲର ବେହରୁ ବିଭିନ୍ନ ନିକଟ ରହିବା ବ୍ୟବସ୍ଥା କରେ । ଯାହା ପଦରେ ଦେଇ ଦିଗକୁ ପିନ୍ଧାଇ ବାହାରେ ପ୍ରତ୍ୟେକ ଦିଗ ତା' ପାଇଁ ସମାନ ଦୂରତା ବଦଳ କରେ । ପଢ଼ି ବେହି ଚେତୁଟି ପ୍ରତ୍ୟେକ ଧାଡ଼ିରୁ ନିକଟ ରୁହେ ତା' ହେଲେ ଜାଲଟି ଖୋଟ ହୋଇଯାଏ । ପରିଧି ଗୋଟିଏ ଦିଗରୁ ବଦଳିଲେ ସମସ୍ତ ଦିଗରୁ ବଦଳିଯାଏ । କିନ୍ତୁ ଏହା ସବୁ ନେବକ ସବୁ ଦିଗକୁ ଦୃଷ୍ଟିରେ ରଖି ଏକ ସୁନ୍ଦର ଯୋଜନା ନେଇ କୁଡ଼ିଆଣୀକୁ ପଢ଼େ ।

ଏହିପରି ଗୋଟିଏ ଶିଶୁର ମନଭିତରେ ସମସ୍ତ ସ୍ଥାନଗୁଡ଼ାକ ପରିଚାଳିତ ହୁଏ ଯାହା ପଦରେ ନିରନ୍ତର ସହ ପ୍ରତ୍ୟେକ ସ୍ୱତନ୍ତ୍ର ଆସ୍ତ୍ରାସ୍ତ୍ରା ସମସ୍ୟାକୁ ଗଠନ କରିପାରେ । ଯାହା ତାଙ୍କ ବାହାରକୁ ପାଇ ପରେ ନାହିଁ ।

ଗୋଟିଏ ଶିଶୁ ସରଳ ସମ୍ପର୍କରେ ବଢ଼ିବା ଓ ବଢ଼ିବା ଜଗତରେ ବଢ଼ିବା ନିଶ୍ଚିତ ଭାବରେ ତାଙ୍କ ଖେଳର ଶୋଟ ଛି ବହୁ ଏହି ଭାବେଣ୍ୟ ବହୁତ କରିଥାଏ ଓ ଭାବେଣ୍ୟ ପ୍ରକାର ଏହା ଉପରେ ନିର୍ଭର କରେ ।

ଏହିପରି ଆମେ ନିଶ୍ଚିତଭାବରେ ଶିଶୁର ଗଠନମୟ ଚିନ୍ତନ ପ୍ରଣାଳୀକୁ ସମ୍ଭାଳ ଦେବା ଉଚିତ ଯେଉଁଥିରେ ଆମର ମନ ଅନାବଶ୍ୟକ ଚିନ୍ତାକୁ ଯାଏ ନାହିଁ । ଏହା ସଂପୂର୍ଣ୍ଣ ଭାବରେ ଗୋଟିଏ ଶିଶୁର ମନଃଶକ୍ତି ଧାରା ଓ ପ୍ରକଣ କରିବା ଶକ୍ତି ଉପରେ ପୁନଃ ଗଠନ ହୋଇଥାଏ ।

ବିଦ୍ୟାଳୟ ମାଧ୍ୟମରେ ଏହି ଦୃଷ୍ଟିକୋଣର ଶିଶୁମାନଙ୍କ ପରାମର୍ଶ ଦିଆ ଯାଇଥାଏ କିନ୍ତୁ ଏହା ଭିତରେ ଅନ୍ୟ ପକ୍ଷରେ ଶିଶୁର ଜୀବନର ଶୈଳ ପ୍ରଭୃତି କରାଯାଏ ।

ପରବର୍ତ୍ତୀ ପର୍ଯ୍ୟାୟରେ ବିଦ୍ୟାଳୟଟି ଶିଶୁର ଜୀବନ ଆବଶ୍ୟକତା ଉପରେ ଆନୁକୂଳି ପାଇଥାଏ । ଶିକ୍ଷା ଶିଶୁ ଭିତରେ ଥିବା ପଶୁ ପ୍ରକୃତିକୁ ବନନ କରିଥାଏ ଓ ମଣିଷ ପାଣିଆର ପ୍ରକୃତି ଗୁଣକୁ ବଦାଇ ଥାଏ ।

ବିଦ୍ୟାଳୟ ବାହାରେ ଶିଶୁର ଜୀବନ ଶୈଳୀର ପ୍ରଣାଳୀକୁ ଗଠନ କରିବାକୁ ହେଲେ "ସ୍ଵାଭାବ" ପରି ଉପ ପାଠ୍ୟପୁସ୍ତକ ବିଷୟ ବହୁତ ଗୁରୁତ୍ୱ ଦିଆଯାଏ ।

ଅନୁଲେଖ ଅନୁଯାୟୀ କୁଡ଼ିଆଣୀ ଜାଲ ଶିଶୁ ଶିକ୍ଷା ପାଇଁ କାହାର ଦୃଷ୍ଟାନ୍ତ?

1. ଶିକ୍ଷା ସମସ୍ତ ଯୋଡ଼ାମାନଙ୍କୁ ବ୍ୟାପିବା କଥା
2. ଶିକ୍ଷାରେ କ୍ଷେତ୍ର ପରୀକ୍ଷଣ ଏକ ସୂକ୍ଷ୍ମ ପ୍ରଣାଳୀ
3. ପ୍ରତ୍ୟାସନିକ ପରିଚାଳନାଟି ଶିକ୍ଷାରେ ଅତ୍ୟନ୍ତ ଛାତ୍ରଛାତ୍ରୀ ବହନ କରିବା
4. ଗୋଟିଏ ଶିଶୁର ମନ ମଧ୍ୟ ଜାଲ ପରି ତିଆରି ହୁଏ

Options :

- 485584146521. 1
- 485584146522. 2
- 485584146523. 3
- 485584146524. 4

Question Number : 247 Question Id : 48558436632 Question Type : MCQ Option Shuffling : No Is Question Mandatory : No Calculator : None Response Time : N.A Think Time : N.A Minimum Instruction Time : 0

Correct Marks : 5 Wrong Marks : 1

Question Key Details :

Key	Value
Comprehension	Comp2

The spider's web occupies a much larger space than does the animal itself. The web represents the spider's field of action in acting as a trap for insects. It is constructed according to a plan. A thread secreted by the spider joins two branches, two rocks, two supports of any kind; then he weaves the rays. The construction proceeds according to a plan. Finally the spider weaves the thread around the center, going around at an always very carefully calculated distance. If the points of support are close together, the web is small. The greater the distance of one from the other, the larger the web will be. But it will always be woven with the same exactness according to a precise plan.

As is the web, so is the mind of the child constructed according to an exact plan. The abstract construction enables him to grasp what happens in his field, which was out of his range heretofore.

Depending on whether the child lives in a simple civilisation or in a complicated world, his web will be more or less large and will enable him to attain more or fewer objectives.

This is why we must respect the interior construction and its manifestations, which may at times seem useless to us. The construction is necessary. It is thanks to this work that the child enlarges his psychic field and subsequently his receptive powers.

To consider the school as the place where instruction is given is one point of view. But to consider the school as a preparation for life is another. In the latter case the school must satisfy all the needs of life.

An education that suppresses the true nature of the child is an education that leads to the development of anomalies.

Scouting, which, outside of school, has brought an organised form of life to children, has therefore always interested us.

Construction of child's mind is:

1. Independent of his context
2. dependent on school's context only
3. dependent on his context
4. dependent on his family's context only

Options :

- 485584146525. 1
- 485584146526. 2
- 485584146527. 3
- 485584146528. 4

Question Number : 247 Question Id : 48558436632 Question Type : MCQ Option Shuffling : No Is Question Mandatory : No Calculator : None Response Time : N.A Think Time : N.A Minimum Instruction Time : 0

Correct Marks : 5 Wrong Marks : 1

Question Key Details :

Key	Value
Comprehension	Comp2

ଅନୁଲେଖନୀକୁ ପଢ଼ି ଯଥାର୍ଥ ଭାବେ ଦିଅ:

ବୁଦ୍ଧିଆଣୀ ଜାଲ ଗୋଟିଏ ପଶୁ ଠାରୁ ମଧ୍ୟ ଚରାଟ କାଢ଼ା ନେଇଥାଏ । ଏହି ବୁଦ୍ଧିଆଣୀ ଜାଲଟି ଆମ ପାଖରେ ବହୁତ ବ୍ୟକ୍ତି ପରସ୍ପର ସଂଯୋଗିତ ହୋଇ ରହିବାର ସୁବିଧା ଦେଇଥାଏ । ଏହା ଗୋଟିଏ ସ୍ଥାନକୁ ନେଇ ଗଠନ ହୋଇଥାଏ । ବୁଦ୍ଧିଆଣୀ ଜାଲଗୁଡ଼ାକ ପ୍ରତ୍ୟେକ ଧାଡ଼ି ବୁଦ୍ଧି ପଥର ବୁଦ୍ଧିକୁ ନିର୍ମିତ କରି ଦିଆ ହୋଇଥାଏ ତା' ପରେ ତା' ବେହରୁ ଗୋଟି ଦିଗରୁ ଚରାଟାନ୍ତି ହୋଇଥାଏ । ଏହା ମଧ୍ୟ ଗୋଟିଏ ସ୍ଥାନକୁ ନେଇ ହୋଇଥାଏ । ଅର୍ଦ୍ଧଶତାବ୍ଦୀରେ ବୁଦ୍ଧିଆଣୀ ଜାଲର ବେହୁ ବିଭିନ୍ନ ନିର୍ମାଣ ରହିବା ଦେଖିବାକୁ ମିଳେ । ପାହା ପଦରେ ଦେଖି ଦିଗକୁ ପିନ୍ଧାକୁ ବାହାରେ ପ୍ରତ୍ୟେକ ଦିଗ ତା' ପାଇଁ ସମାନ ଦୂରତା ବଦଳ କରେ । ପଢ଼ି ବେହି ଚେହୁଟି ପ୍ରତ୍ୟେକ ଧାଡ଼ିରୁ ନିକଟ ରୁହେ ତା' ହେଲେ ଜାଲଟି ଶୋଷ ହୋଇଯାଏ । ପରିଧି ଗୋଟିଏ ଦିଗରୁ ବଢ଼ିଗଲେ ସମସ୍ତ ଦିଗରୁ ବଢ଼ିଯାଏ । କିନ୍ତୁ ଏହା ସବୁ ନେବକ ସବୁ ଦିଗକୁ ଦୃଷ୍ଟିରେ ରଖି ଏକ ସୁନ୍ଦର ଯୋଜନା ନେଇ ବୁଣିବାକୁ ପଡ଼େ ।

ଏହିପରି ଗୋଟିଏ ଶିଶୁର ମନଭିତରେ ସମସ୍ତ ସ୍ଥାନଗୁଡ଼ାକ ପରିଚାଳିତ ହୁଏ ଯାହା ପଦରେ ନିର୍ମିତର ସହ ପ୍ରତ୍ୟେକ ସ୍ୱତନ୍ତ୍ର ଆସ୍ତ୍ରାଣ ସମସ୍ୟାକୁ ଗଠନ କରିପାରେ । ପାହା ପାଦ ଗାଢ଼ାରେ ପାଇ ପରେ ନାହିଁ ।

ଗୋଟିଏ ଶିଶୁ ସରଳ ସମ୍ପର୍କରେ ବଢ଼ିବା ଓ ବଢ଼ିବା ଜଗତରେ ବଢ଼ିବା ନିଶ୍ଚିତ ଭାବରେ ତାଙ୍କ ଖେଳ ଶୋଷା ଛାଡ଼ି ଏହି ଉଦ୍ଦେଶ୍ୟ ବହୁତ କରିଥାଏ ଓ ଉଦ୍ଦେଶ୍ୟ ପୂର୍ଣ୍ଣକ ଏହା ଉପରେ ନିର୍ଭର କରେ ।

ଏହିପରି ଆମେ ନିଶ୍ଚିତଭାବରେ ଶିଶୁର ଗଠନମାନ ଚିତ୍ର ପ୍ରଣାଳୀକୁ ସମ୍ଭାଳ ଦେବା ଉଚିତ ଯେଉଁଥିରେ ଆମର ମନ ଅନ୍ୟାନ୍ୟକ ଚିତ୍ରକୁ ଯାଏ ନାହିଁ । ଏହା ସଂପୂର୍ଣ୍ଣ ଭାବରେ ଗୋଟିଏ ଶିଶୁର ମନଃଶକ୍ତି ଧାରା ଓ ପ୍ରକାଶ କରିବା ଶକ୍ତି ଉପରେ ପୁନଃ ଗଠନ ହୋଇଥାଏ ।

ବିଦ୍ୟାଳୟ ମାନଙ୍କରେ ଏହି ପ୍ରକାଶର ଶିଶୁମାନଙ୍କ ପରାମର୍ଶ ଦିଆ ଯାଇଥାଏ କିନ୍ତୁ ଏହା ଭିତରେ ଅନ୍ୟ ପକ୍ଷରେ ଶିଶୁର ଜୀବନର ଶୈଳି ପ୍ରଭୃତି କରାଯାଏ ।

ପରବର୍ତ୍ତୀ ପର୍ଯ୍ୟାୟରେ ବିଦ୍ୟାଳୟଟି ଶିଶୁର ଜୀବନ ଆବଶ୍ୟକତା ଉପରେ ଆନୁଷ୍ଠି ପାଇଥାଏ । ଶିକ୍ଷା ଶିଶୁ ଭିତରେ ଥିବା ପଶୁ ପ୍ରକୃତିକୁ ବଦଳ କରିଥାଏ ଓ ମଣିଷ ପାଣିଆର ପ୍ରକୃତି ଗୁଣକୁ ବଦଳ ଥାଏ ।

ବିଦ୍ୟାଳୟ ବାହାରେ ଶିଶୁର ଜୀବନ ଶୈଳୀର ପ୍ରଣାଳୀକୁ ଗଠନ କରିବାକୁ ହେଲେ "ସ୍ଵାଭାବ" ପରି ଉପ ପାଠ୍ୟକ୍ରମର ବିଷୟ ବସ୍ତୁକୁ ଗୁରୁତ୍ୱ ଦିଆଯାଏ ।

ନିମ୍ନରେ ଦୁଇଟି ଭଣ୍ଡି ଦିଆଯାଇଛି: ଗୋଟିଏ ଉଦ୍ଦେଶ୍ୟ A ଏବଂ ଅନ୍ୟଟି ଜାଗଣ R

ଉଦ୍ଦେଶ୍ୟ A: ଉପଯୁକ୍ତ ସଭ୍ୟତାରେ ଶିଶୁଟି ରହିଲେ କିନ୍ତୁ ତା'ର ମନ ବିଚାରି ପ୍ରକାର ଉଦ୍ଦେଶ୍ୟ ମାନକୁ ଗ୍ରହଣ କରିପାରେ

ଜାଗଣ R: ଶିଶୁର ମନ ଗଠନ ନିବନ୍ଧ ଭାବରେ ଏକ ସ୍ୱତନ୍ତ୍ର ପ୍ରକ୍ରିୟା

ଦୁଇଟି ଭଣ୍ଡିକୁ ନାକ୍ଷ୍ୟ କରି, ନିମ୍ନରେ ଦିଆଯାଇଥିବା ବିକଳ ମାନଙ୍କ ମଧ୍ୟରୁ ସଠିକ ଭାବରେ ଚୟନ କର ।

1. ଉଭୟ A ଓ R ଠିକ ଏବଂ R ଠିକ ଉଦ୍ଦେଶ୍ୟ A ର

2. ଉଭୟ A ଓ R ଠିକ ଏବଂ R ତୁଳ ଉଦ୍ଦେଶ୍ୟ A ର

3. A ଠିକ କିନ୍ତୁ R ତୁଳ

4. A ତୁଳ କିନ୍ତୁ R ଠିକ

Options :

- 485584146525. 1
- 485584146526. 2
- 485584146527. 3
- 485584146528. 4

Question Number : 248 Question Id : 48558436633 Question Type : MCQ Option Shuffling : No Is Question Mandatory : No Calculator : None Response Time : N.A Think Time : N.A Minimum Instruction Time : 0

Correct Marks : 5 Wrong Marks : 1

Question Key Details :

Key	Value
Comprehension	Comp2

The spider's web occupies a much larger space than does the animal itself. The web represents the spider's field of action in acting as a trap for insects. It is constructed according to a plan. A thread secreted by the spider joins two branches, two rocks, two supports of any kind; then he weaves the rays. The construction proceeds according to a plan. Finally the spider weaves the thread around the center, going around at an always very carefully calculated distance. If the points of support are close together, the web is small. The greater the distance of one from the other, the larger the web will be. But it will always be woven with the same exactness according to a precise plan.

As is the web, so is the mind of the child constructed according to an exact plan. The abstract construction enables him to grasp what happens in his field, which was out of his range heretofore.

Depending on whether the child lives in a simple civilisation or in a complicated world, his web will be more or less large and will enable him to attain more or fewer objectives.

This is why we must respect the interior construction and its manifestations, which may at times seem useless to us. The construction is necessary. It is thanks to this work that the child enlarges his psychic field and subsequently his receptive powers.

To consider the school as the place where instruction is given is one point of view. But to consider the school as a preparation for life is another. In the latter case the school must satisfy all the needs of life.

An education that suppresses the true nature of the child is an education that leads to the development of anomalies.

Scouting, which, outside of school, has brought an organised form of life to children, has therefore always interested us.

According to the passage, what should be the aim of education?

1. Nurture the true nature of a child.
2. Overpower the interior construction of a child's mind.
3. Restrict a child's psychic field and promote scientific temperament.
4. Provide instruction and enable the child's participation in the economy.

Options :

- 485584146529. 1
- 485584146530. 2
- 485584146531. 3
- 485584146532. 4

Question Number : 248 Question Id : 48558436633 Question Type : MCQ Option Shuffling : No Is Question Mandatory : No Calculator : None Response Time : N.A Think Time : N.A Minimum Instruction Time : 0

Correct Marks : 5 Wrong Marks : 1

Question Key Details :

Key	Value
Comprehension	Comp2

ଅନୁଲେଖକଙ୍କୁ ପଢ଼ି ପଞ୍ଚାୟି ଭରଣ ଦିଅ:

କୁଡ଼ିଆଣୀ ଜାଲ ଗୋଟିଏ ପଶୁ ଠାରୁ ମଧ୍ୟ ଚିରାଟ ଜାଗା ନେଇଥାଏ । ଏହି କୁଡ଼ିଆଣୀ ଜାଲଟି ଆମ ପାଖରେ ବହୁତ ବ୍ୟକ୍ତି ପରସ୍ପର ସଂପର୍କିତ ହୋଇ ରହିବାର ସୂଚନା ଦେଇଥାଏ । ଏହା ଗୋଟିଏ ପୁସ୍ତକକୁ ନେଇ ଗଠନ ହୋଇଥାଏ । କୁଡ଼ିଆଣୀ ଜାଲଗୁଡ଼ାର ପ୍ରତ୍ୟେକ ଧାଡ଼ି ଦୁଇଟି ପଥର ଦୁଇଟିକୁ ନିର୍ଦ୍ଧାରଣ କରି ଦେଖା ହୋଇଥାଏ ତା' ପରେ ତା' ବେହରୁ ଗୋଟି ଦିଗର ଚରଣାକ୍ଷିତ ହୋଇଥାଏ । ଏହା ମଧ୍ୟ ଗୋଟିଏ ପୁସ୍ତକକୁ ନେଇ ହୋଇଥାଏ । ଅର୍ଦ୍ଧଶତାବ୍ଦୀରେ କୁଡ଼ିଆଣୀ ଜାଲର ଯେତୁ ବିଦ୍ରୁରେ ନିଜେ ରହିବା ବ୍ୟବସ୍ଥା କରେ । ପାହା ପଦରେ ପେଟି ଦିଗକୁ ପିନ୍ଧାକୁ ବାହାଁ ପ୍ରତ୍ୟେକ ଦିଗ ତା' ପାଇଁ ସମାନ ଦୂରତା ବଦଳ କରେ । ପଢ଼ି ବେଶି କେତୁଟି ପ୍ରତ୍ୟେକ ଧାଡ଼ିରୁ ନିକଟ ରୁହେ ତା' ହେଲେ ଜାଲଟି ଛୋଟ ହୋଇଥାଏ । ପଢ଼ିଥି ଗୋଟିଏ ଦିଗରୁ ବଢ଼ିଗଲେ ସମସ୍ତ ଦିଗରୁ ବଢ଼ିଯାଏ । କିନ୍ତୁ ଏହା ସବୁ କେବଳ ସବୁ ଦିଗକୁ ଦୃଷ୍ଟିରେ ରହି ଏକ ସୁନ୍ଦର ଯୋଜନା ନେଇ କୁଡ଼ିଆଣୀକୁ ପଢ଼େ ।

ଏହିପରି ଗୋଟିଏ ଶିଶୁର ମାନସିକରେ ସମସ୍ତ ସ୍ୱାଧୀନତାକୁ ପରିଚାଳିତ ହୁଏ ପାହା ପଦରେ ନିର୍ଦ୍ଧାରଣ ସହ ପ୍ରତ୍ୟେକ ସ୍ତରରୁ ଆସୁଥିବା ସମସ୍ତାକୁ ଗଠନ କରିପାରେ । ପାହା ପାଠ ଗାଠରୁ ପାଠ ପରେ ନାହିଁ ।

ଗୋଟିଏ ଶିଶୁ ସରଳ ସମ୍ପର୍କରେ ବଢ଼ିବା ଓ ବଢ଼ିବ ଜଗତରେ ବଢ଼ିବା ନିଶ୍ଚିତ ଭାବରେ ତାର ଝିଲେକ ଛୋଟ କି ବଡ଼ ଏହି ଭିନ୍ନଭିନ୍ନ ବହୁତ କରିଥାଏ ଓ ଭିନ୍ନଭିନ୍ନ ପ୍ରକାର ଏହା ଉପରେ ନିର୍ଭର କରେ ।

ଏହିପରି ଆମେ ନିଶ୍ଚିତଭାବରେ ଶିଶୁର ଗଠନମାନ ଚିତ୍ରଣ ପ୍ରଣାଳୀକୁ ସମ୍ଭାଳ ଦେବା ଉଚିତ ପେଟିଥିଲେ ଆମର ମନ ଅନାବଶ୍ୟକ ଚିନ୍ତାକୁ ଯାଏ ନାହିଁ । ଏହା ସଂପୂର୍ଣ୍ଣ ଭାବରେ ଗୋଟିଏ ଶିଶୁର ମନଃଶକ୍ତିର ଧାରା ଓ ପ୍ରକ୍ରିୟା କରଣା ଶକ୍ତି ଉପରେ ପ୍ରମୁଖ ଗଠନ ହୋଇଥାଏ ।

ବିଦ୍ୟାଳୟ ମାନଙ୍କରେ ଏହି ପ୍ରକ୍ରିୟାକ୍ରମ ଶିଶୁମାନଙ୍କ ପରାମର୍ଶ ଦିଆ ଯାଇଥାଏ କିନ୍ତୁ ଏହା ଭିତରେ ଅନ୍ୟ ପକ୍ଷରେ ଶିଶୁର ଜୀବନର ଶୈଳ ପ୍ରଭୃତି କରାଯାଏ ।

ପରବର୍ତ୍ତୀ ପର୍ଯ୍ୟାୟରେ ବିଦ୍ୟାଳୟଟି ଶିଶୁର ଜୀବନ ଆବଶ୍ୟକତା ଉପରେ ଆନୁଷ୍ଠି ପାରିଥାଏ । ଶିକ୍ଷା ଶିଶୁ ଭିତରେ ଥିବା ପଶୁ ପ୍ରକୃତିକୁ ଦମନ କରିଥାଏ ଓ ମଣିଷ ପାଣିଆର ପ୍ରକୃତି ଗୁଣକୁ ବଢ଼ାଇ ଥାଏ ।

ବିଦ୍ୟାଳୟ ଗାଠରେ ଶିଶୁର ଜୀବନ ଶୈଳୀର ପ୍ରଣାଳୀକୁ ଗଠନ କରିବାକୁ ହେଲେ "ସ୍ୱାଭାବ" ପଢ଼ି ଉପ ପାଠ୍ୟକ୍ରମର ବିଷୟ ବସ୍ତୁକୁ ଗୁରୁତ୍ୱ ଦିଆଯାଏ ।

ଅନୁଲେଖ ଅନୁଯାୟୀ ଉତ୍ତର ଲେଖ୍ୟ ଜଣ ହେବା ଭରଣ?

1. ଶିଶୁର ନିଜସ୍ୱ ପ୍ରକୃତି ହେଉଛି ପ୍ରାକୃତିକ
2. ଶିଶୁର ମାନସିକ ଶକ୍ତି ତାର ଆଚ୍ଛନ୍ଦର ଗଠନ ପ୍ରକ୍ରିୟା
3. ଶିଶୁର ମନକୁ ଅବରୋଧ କରି ବୈଜ୍ଞାନିକ ପଦ୍ଧତିରେ ଆବେଗବା
4. ଶିଶୁକୁ ଆର୍ଥିକ ଯୋଗଦାନରେ ସୁକ୍ତିସୂତ୍ର ସୂଚନା ପ୍ରଦାନ କରିବା

Options :

- 485584146529. 1
- 485584146530. 2
- 485584146531. 3
- 485584146532. 4

Question Number : 249 Question Id : 48558436634 Question Type : MCQ Option Shuffling : No Is Question Mandatory : No Calculator : None Response Time : N.A Think Time : N.A Minimum Instruction Time : 0

Correct Marks : 5 Wrong Marks : 1

Question Key Details :

Key	Value
Comprehension	Comp2

The spider's web occupies a much larger space than does the animal itself. The web represents the spider's field of action in acting as a trap for insects. It is constructed according to a plan. A thread secreted by the spider joins two branches, two rocks, two supports of any kind; then he weaves the rays. The construction proceeds according to a plan. Finally the spider weaves the thread around the center, going around at an always very carefully calculated distance. If the points of support are close together, the web is small. The greater the distance of one from the other, the larger the web will be. But it will always be woven with the same exactness according to a precise plan.

As is the web, so is the mind of the child constructed according to an exact plan. The abstract construction enables him to grasp what happens in his field, which was out of his range heretofore.

Depending on whether the child lives in a simple civilisation or in a complicated world, his web will be more or less large and will enable him to attain more or fewer objectives.

This is why we must respect the interior construction and its manifestations, which may at times seem useless to us. The construction is necessary. It is thanks to this work that the child enlarges his psychic field and subsequently his receptive powers.

To consider the school as the place where instruction is given is one point of view. But to consider the school as a preparation for life is another. In the latter case the school must satisfy all the needs of life.

An education that suppresses the true nature of the child is an education that leads to the development of anomalies.

Scouting, which, outside of school, has brought an organised form of life to children, has therefore always interested us.

In the author's view, what does a limited perspective of education do to a child?

1. Enables him to grasp concepts easily.
2. Helps him to attain more objectives.
3. Suppresses his true nature.
4. Encourages his thinking abilities.

Options :

485584146533. 1
485584146534. 2
485584146535. 3
485584146536. 4

Question Number : 249 Question Id : 48558436634 Question Type : MCQ Option Shuffling : No Is Question Mandatory : No Calculator : None Response Time : N.A Think Time : N.A Minimum Instruction Time : 0

Correct Marks : 5 Wrong Marks : 1

Question Key Details :

Key	Value
Comprehension	Comp2

ଅନୁଲେଖନୀକୁ ପଢ଼ି ଯଥାର୍ଥ ଭାବେ ଦିଅ:

କୁଡ଼ିଆଣୀ ଜାଲ ଗୋଟିଏ ପଶୁ ଠାରୁ ମଧ୍ୟ ଚିରାଟ କାଜା ନେଇଥାଏ । ଏହି କୁଡ଼ିଆଣୀ ଜାଲଟି ଆମ ପାଖରେ ବହୁତ ବ୍ୟକ୍ତି ପରସ୍ପର ସଂଯୋଗିତ ହୋଇ ରହିବାର ସୁବିଧା ଦେଇଥାଏ । ଏହା ଗୋଟିଏ ସ୍ଥାନକୁ ନେଇ ଗଠନ ହୋଇଥାଏ । କୁଡ଼ିଆଣୀ ଜାଲଗୁଡ଼ାର ପ୍ରତ୍ୟେକ ଧାଡ଼ି ଦୁଇଟି ପଥର ଦୁଇଟିକୁ ନିର୍ଦ୍ଧାରଣ କରି ବନ୍ଧା ହୋଇଥାଏ ତା' ପରେ ତା' ବେହରୁ ଗୋଟି ଦିଗରୁ ଚଳାନ୍ତି ହୋଇଥାଏ । ଏହା ମଧ୍ୟ ଗୋଟିଏ ସ୍ଥାନକୁ ନେଇ ହୋଇଥାଏ । ଅର୍ଦ୍ଧଶତାବ୍ଦୀରେ କୁଡ଼ିଆଣୀ ଜାଲର ବେହରୁ ବିଭିନ୍ନ ନିକଟ ରହିବା ବ୍ୟବସ୍ଥା କରେ । ଯାହା ପଦରେ ଦେଇ ଦିଗକୁ ପିନ୍ଧାକୁ ବାହାରେ ପ୍ରତ୍ୟେକ ଦିଗ ତା' ପାଇଁ ସମାନ ଦୂରତା ବଦଳ କରେ । ପଢ଼ି ବେହି ଚେତୁଟି ପ୍ରତ୍ୟେକ ଧାଡ଼ିରୁ ନିକଟ ରୁହେ ତା' ହେଲେ ଜାଲଟି ଖୋଟ ହୋଇଥାଏ । ପରିଧି ଗୋଟିଏ ଦିଗରୁ ବଢ଼ିଗଲେ ସମସ୍ତ ଦିଗରୁ ବଢ଼ିଯାଏ । କିନ୍ତୁ ଏହା ସବୁ ନେବକ ସବୁ ଦିଗକୁ ଦୃଷ୍ଟିରେ ରଖି ଏକ ସୁନ୍ଦର ଯୋଜନା ନେଇ କୁଡ଼ିଆଣୀକୁ ପଢ଼େ ।

ଏହିପରି ଗୋଟିଏ ଶିଶୁର ମନଭିତରେ ସମସ୍ତ ସ୍ଥାନଗୁଡ଼ାକ ପରିଚାଳିତ ହୁଏ ଯାହା ପଦରେ ନିରନ୍ତର ସହ ପ୍ରତ୍ୟେକ ସ୍ୱତନ୍ତ୍ର ଆସ୍ତ୍ରାସ୍ତ୍ରା ସମସ୍ୟାକୁ ଗଠନ କରିପାରେ । ଯାହା ତାର ବାହାରକୁ ପାଇ ପରେ ନାହିଁ ।

ଗୋଟିଏ ଶିଶୁ ସରଳ ସମ୍ପର୍କରେ ବଢ଼ିବା ଓ ବଢ଼ିବା ଜଗତରେ ବଢ଼ିବା ନିଶ୍ଚିତ ଭାବରେ ତାର ଖେଳ ଗୋଟା ହିଁ ବହୁ ଏହି ଉଦ୍ଦେଶ୍ୟ ବହନ କରିଥାଏ ଓ ଉଦ୍ଦେଶ୍ୟ ପୂର୍ଣ୍ଣକ ଏହା ଉପରେ ନିର୍ଭର କରେ ।

ଏହିପରି ଆମେ ନିଶ୍ଚିତଭାବରେ ଶିଶୁର ଗଠନମୟ ଚିନ୍ତନ ପ୍ରଣାଳୀକୁ ସମ୍ମାନ ଦେବା ଉଚିତ ଯେଉଁଥିରେ ଆମର ମନ ଅନାବଶ୍ୟକ ଚିନ୍ତାକୁ ଯାଏ ନାହିଁ । ଏହା ସଂପୂର୍ଣ୍ଣ ଭାବରେ ଗୋଟିଏ ଶିଶୁର ମନଃଶକ୍ତି ଧାରା ଓ ପ୍ରକଣ କରିବା ଶକ୍ତି ଉପରେ ପୁନଃ ଗଠନ ହୋଇଥାଏ ।

ବିଦ୍ୟାରତ୍ନ ମାସକରେ ଏହି ଦୁର୍ଘଟକାଣ୍ଡର ଶିଶୁମାନଙ୍କ ପରାମର୍ଶ ଦିଆ ଯାଇଥାଏ କିନ୍ତୁ ଏହା ଭିତରେ ଅନ୍ୟ ପକ୍ଷରେ ଶିଶୁର ଜୀବନର ଶୈଳ ପ୍ରଭୃତି କରାଯାଏ ।

ପରବର୍ତ୍ତୀ ପର୍ଯ୍ୟାୟରେ ବିଦ୍ୟାରତ୍ନ ଶିଶୁର ଜୀବନ ଆବଶ୍ୟକତା ଉପରେ ଆନୁଷ୍ଠି ପାଇଥାଏ । ଶିଶୁ ଶିଶୁ ଭିତରେ ଶୁଭ ପଶୁ ପ୍ରକୃତିକୁ ବଦଳ କରିଥାଏ ଓ ମଣିଷ ପାଣିଆର ପ୍ରକୃତି ଗୁଣକୁ ବଦଳ ଥାଏ ।

ବିଦ୍ୟାରତ୍ନ ବାହାରେ ଶିଶୁର ଜୀବନ ଶୈଳୀର ପ୍ରଣାଳୀକୁ ଗଠନ କରିବାକୁ ହେଲେ "ସ୍ଵାଭାବ" ପରି ଉପ ପାଠ୍ୟକ୍ରମର ବିଷୟ ବସ୍ତୁକୁ ଗୁରୁତ୍ୱ ଦିଆଯାଏ ।

କେଳାକଳ୍ପ ମତରେ ଗୋଟିଏ ଶିଶୁ ପାଇଁ ନିହାତି କେତେ ମାତ୍ରାରେ ଗ୍ରହଣ ଯୋଗ୍ୟ ଅବସ୍ଥିତି ଥାଏ

1. ବିଷୟବସ୍ତୁକୁ ଭଲଭାବରେ ବୁଝିବାକୁ ସମ୍ମତ କରିବା
2. ଅନେକ ଉଦ୍ଦେଶ୍ୟ ସାଧନ କରିବାରେ ସାହାଯ୍ୟ କରିବା
3. ବାଞ୍ଛିତ ପ୍ରକୃତିକୁ ଅବଗୋଧ କରିବା
4. ତାର ଚିନ୍ତନ ବକ୍ଷତାକୁ ଉଦ୍ଦୀପିତ କରିବା

Options :

485584146533. 1
485584146534. 2
485584146535. 3
485584146536. 4

Question Number : 250 Question Id : 48558436635 Question Type : MCQ Option Shuffling : No Is Question Mandatory : No Calculator : None Response Time : N.A Think Time : N.A Minimum Instruction Time : 0

Correct Marks : 5 Wrong Marks : 1

Question Key Details :

Key	Value
Comprehension	Comp2

The spider's web occupies a much larger space than does the animal itself. The web represents the spider's field of action in acting as a trap for insects. It is constructed according to a plan. A thread secreted by the spider joins two branches, two rocks, two supports of any kind; then he weaves the rays. The construction proceeds according to a plan. Finally the spider weaves the thread around the center, going around at an always very carefully calculated distance. If the points of support are close together, the web is small. The greater the distance of one from the other, the larger the web will be. But it will always be woven with the same exactness according to a precise plan.

As is the web, so is the mind of the child constructed according to an exact plan. The abstract construction enables him to grasp what happens in his field, which was out of his range heretofore.

Depending on whether the child lives in a simple civilisation or in a complicated world, his web will be more or less large and will enable him to attain more or fewer objectives.

This is why we must respect the interior construction and its manifestations, which may at times seem useless to us. The construction is necessary. It is thanks to this work that the child enlarges his psychic field and subsequently his receptive powers.

To consider the school as the place where instruction is given is one point of view. But to consider the school as a preparation for life is another. In the latter case the school must satisfy all the needs of life.

An education that suppresses the true nature of the child is an education that leads to the development of anomalies.

Scouting, which, outside of school, has brought an organised form of life to children, has therefore always interested us.

Which of the following are characteristics of the construction of a child's mind ?

- A. Moving outside the school restricts a child's mind.
- B. A child's mind is constructed according to a precise plan.
- C. Organisation of a child's mind may affect its receptive abilities.
- D. Inhibiting a child's true nature can lead to the development of abnormality.
- E. Concrete construction enables it to access different kinds of knowledge.

Choose the correct answer from the options given below:

- 1. A, C and D only
- 2. A, B and C only
- 3. B, C and D only
- 4. B, C, D and E only

Options :

- 485584146537. 1
- 485584146538. 2
- 485584146539. 3
- 485584146540. 4

Question Number : 250 Question Id : 48558436635 Question Type : MCQ Option Shuffling : No Is Question Mandatory : No Calculator : None Response Time : N.A Think Time : N.A Minimum Instruction Time : 0

Correct Marks : 5 Wrong Marks : 1

Question Key Details :

Key	Value
Comprehension	Comp2

ଅନୁଲେଖକଙ୍କୁ ପଢ଼ି ପଢ଼ାଏଁ ଭଲ ବିଧି:

କୁଡ଼ିଆଣୀ ଜାଲ ଗୋଟିଏ ପଶୁ ଠାରୁ ମଧ୍ୟ ବିରାଟ ଜାତୀୟ ନେଇଥାଏ । ଏହି କୁଡ଼ିଆଣୀ ଜାଲଟି ଆମ ପାଖରେ ବହୁତ ବ୍ୟକ୍ତି ପରସ୍ପର ସଂଯୋଜିତ ହୋଇ ରହିବାର ସୂଚନା ଦେଇଥାଏ । ଏହା ଗୋଟିଏ ପ୍ଲାନକୁ ନେଇ ଗଠନ ହୋଇଥାଏ । କୁଡ଼ିଆଣୀ ଜାଲଗୁଡ଼ାର ପ୍ରତ୍ୟେକ ଧାଡ଼ି ଦୁଇଟି ପଥର ଦୁଇଟିକୁ ନିର୍ଦ୍ଧାରଣ କରି ଦିଆ ହୋଇଥାଏ ତା' ପରେ ତା' ବେହରୁ ଗୋଟି ଦିଗରୁ ତରଙ୍ଗାକାର ହୋଇଥାଏ । ଏହା ମଧ୍ୟ ଗୋଟିଏ ପ୍ଲାନକୁ ନେଇ ହୋଇଥାଏ । ଉର୍ଦ୍ଧ୍ୱଦିଗରେ କୁଡ଼ିଆଣୀ ଜାଲର ଯେତ୍ର ବିନ୍ଦୁରେ ନିଜେ ରହିବା ବ୍ୟବସ୍ଥା କରେ । ଯାହା ପଞ୍ଚରେ ଯେଉଁ ଦିଗକୁ ପିନ୍ଧାକୁ ଚାହେଁ ପ୍ରତ୍ୟେକ ଦିଗ ତା' ପାଇଁ ସମାନ ଦୂରତା ବଜ୍ରନ କରେ । ଯଦି ସେହି କେନ୍ଦ୍ରଟି ପ୍ରତ୍ୟେକ ଧାଡ଼ିରୁ ନିଜର ଦୂରତା ତା' ବେଳେ ଜାଲଟି ଛୋଟ ହୋଇଥାଏ । ପରିଧି ଗୋଟିଏ ଦିଗରୁ ବଢ଼ିଗଲେ ସମସ୍ତ ଦିଗରୁ ବଢ଼ିଯାଏ । କିମ୍ତ ଏହା ସବୁ କେବଳ ସବୁ ଦିଗକୁ ଦୃଷ୍ଟିରେ ରହି ଏକ ସୁନ୍ଦର ଯୋଜନା ନେଇ କୁଡ଼ିଆଣୀକୁ ପଢ଼େ ।

ଏହିପରି ଗୋଟିଏ ଶିଶୁର ମନଭିତରେ ସମସ୍ତ ପ୍ଲାନଗୁଡ଼ାକ ପରିଚାଳିତ ହୁଏ ଯାହା ପଞ୍ଚରେ ନିଜର ନିଜ ସହ ପ୍ରତ୍ୟେକ ସ୍ୱପ୍ନରୁ ଆସୁଥିବା ସମସ୍ତାକୁ ଗଠନ କରିପାରେ । ଯାହା ତାର ବାହାରକୁ ପାଇ ପରେ ନାହିଁ ।

ଗୋଟିଏ ଶିଶୁ ସରଳ ସମ୍ପର୍କରେ ବଢ଼ିବା ଓ ଜଟିଳ ଜଗତରେ ବଢ଼ିବା ନିଶ୍ଚିତ ଭାବରେ ତାର ଖସେବ ଛୋଟ କି ବଡ଼ ଏହି ଭିନ୍ନଭିନ୍ନ ବସ୍ତୁ କରିଥାଏ ଓ ଭିନ୍ନଭିନ୍ନ ପ୍ରକାର ଏହା ଭିତରେ ନିର୍ଦ୍ଧାରଣ କରେ ।

ଏହିପରି ଆଲୋଚନାରେ ନିଶ୍ଚିତଭାବରେ ଶିଶୁର ଗଠନମାନ ଚିତ୍ରଣ ପ୍ରଣାଳୀକୁ ସମ୍ଭବ ଦେବା ଉଚିତ ଯେଉଁଥିରେ ଅମଳ ମନ ଅନାବଶ୍ୟକ ଚିନ୍ତାକୁ ଯାଏ ନାହିଁ । ଏହା ସଂପୂର୍ଣ୍ଣ ଭାବରେ ଗୋଟିଏ ଶିଶୁର ମନଭିତରେ ଧାରା ଓ ପ୍ରକ୍ଷଣ କରିବା ଶକ୍ତି ଭିତରେ ପ୍ରକାଶ ଗଠନ ହୋଇଥାଏ ।

ବିଦ୍ୟାଳୟ ମାଧ୍ୟମରେ ଏହି ଦୃଷ୍ଟିକୋଣର ଶିଶୁମାନଙ୍କ ପରାମର୍ଶ ଦିଆ ଯାଇଥାଏ କିମ୍ତ ଏହା ଭିତରେ ଅନ୍ୟ ପକ୍ଷରେ ଶିଶୁର ଜୀବନର ଶୈଳ ପ୍ରଭୃତି କରାଯାଏ ।

ପରବର୍ତ୍ତୀ ପର୍ଯ୍ୟାୟରେ ବିଦ୍ୟାଳୟଟି ଶିଶୁର ଜୀବନ ଆବଶ୍ୟକତା ଭିତରେ ଆନୁଷ୍ଠାନିକ ପାରିଥାଏ । ଶିକ୍ଷା ଶିଶୁ ଭିତରେ ଥିବା ପଶୁ ପ୍ରକୃତିକୁ ବ୍ୟବହାର କରିଥାଏ ଓ ମଣିଷ ପାଣିଆର ପ୍ରକୃତି ଗୁଣକୁ ବ୍ୟବହାର ଥାଏ ।

ବିଦ୍ୟାଳୟ ବାହାରେ ଶିଶୁର ଜୀବନ ଶୈଳୀର ପ୍ରଣାଳୀକୁ ଗଠନ କରିବାକୁ କେବଳ "ଖାଲି" ପଢ଼ି ତେ ପାଠ୍ୟପୁସ୍ତକ ଚିନ୍ତା ବସ୍ତୁକୁ ଗ୍ରହଣ ଦିଆଯାଏ ।

ନିମ୍ନୋକ୍ତ ମଧ୍ୟରୁ କେଉଁଟି ଶିଶୁର ମନକୁ ଗଠନ କରିଥାଏ ?

- A. ବିଦ୍ୟାଳୟ ବାହାରେ କୁଳିବାରେ ଶିଶୁର ମନକିଛି ରଖିବା।
- B. ମୂଲ୍ୟବାନ ଜ୍ଞାନ ମାଧ୍ୟମରେ ଶିଶୁର ମନକୁ ଗଠନ କରିବା
- C. ଶିଶୁର ବସ୍ତୁର ଅନୁସାରେ ମାନସିକ ଗୁଣର ଶକ୍ତି ହୋଇଥାଏ।
- D. ଶିଶୁର ପ୍ରକୃତି ପାରମ୍ପାରିକ ବିକଶିତ କରିବାରେ ଆନୁନିହିତ ହୋଇରହିଥାଏ।
- E. ବିଭିନ୍ନ ପ୍ରକାର ଜ୍ଞାନ ଶିଶୁକୁ ଦୃଢ଼ ଭାବେ ଗଠନ ନକରିପାରେ।

ନିମ୍ନୋକ୍ତ ଉପରୋକ୍ତ ସଠିକ ଭାବରେ ଚିହ୍ନଟି କରନ୍ତୁ:

- 1. କେବଳ A, C ଓ D
- 2. କେବଳ A, B ଓ C
- 3. କେବଳ B, C ଓ D
- 4. କେବଳ B, C, D ଓ E

Options :

485584146537. 1

485584146538. 2

485584146539. 3

485584146540. 4