

National Testing Agency

Question Paper Name : 22S1 INT
Subject Name : 22JunShift1 Subject Combination International
Creation Date : 2023-06-22 15:17:58
Duration : 105
Total Marks : 450
Display Marks: Yes

English

Group Number : 1
Group Id : 485584827
Group Maximum Duration : 45
Group Minimum Duration : 45
Show Attended Group? : No
Edit Attended Group? : No
Break time : 0
Group Marks : 200
Is this Group for Examiner? : No
Examiner permission : Cant View
Show Progress Bar? : No

English

Section Id : 485584951
Section Number : 1
Section type : Online
Mandatory or Optional : Mandatory
Number of Questions : 50
Number of Questions to be attempted : 40
Section Marks : 200
Enable Mark as Answered Mark for Review and Clear Response : Yes
Maximum Instruction Time : 0
Sub-Section Number : 1
Sub-Section Id : 4855842705
Question Shuffling Allowed : No
Is Section Default? : null

Question Number : 1 Question Id : 48558436746 Question Type : MCQ Option Shuffling : No Is Question Mandatory : No Calculator : None Response Time : N.A Think Time : N.A Minimum Instruction Time : 0

Correct Marks : 5 Wrong Marks : 1

Question Key Details :

Key	Value
Comprehension	Comp1

Read the given passage and answer the questions that follow:-

The small village of Somnathpur contains an extraordinary temple, built around AD 1268 by the Hoysalas of Karnataka-one of the most prolific temple builders. Belur and Helebidu are among their better-known works. While these suffered during the invasion of the 14th century, the Somnathpur temple stands more or less intact in near-original condition. This small temple captivates with the beauty and vitality of its detailed sculpture, covering almost every inch of the walls, pillars, and even ceilings. It has three Shikaras and stands on a star-shaped, raised platform with 24 edges. The outer walls have a profusion of detailed carvings: the entire surface run over by carved plaques of stone. There are vertical panels covered by exquisite figures of gods and goddesses, with many incarnations being depicted. There are nymphs too, some carrying an ear of maize, a symbol of plenty and prosperity. The elaborate ornamentation, very characteristic of the Hoysala sculptures, is a remarkable feature. A closer look at the series of friezes on the outer walls reveal intricately carved caparisoned elephants, charging horsemen, stylized flowers, warriors, musicians crocodiles and swans.

The temple was actually commissioned by Sona Dandanayaka or Somnath (who named the village after himself), the minister of the Hoysala king, Narsimha the third. The temple was built to house three forms of Vishnu. The inner centre of the temple was the *kalyanamandapa*. Leading from here are three corridors, each ending in a shrine, one for each form of Vishnu-Venugopala, Janardana and Prasanna Keshava, though only two remain in their original form.

In whose honour is the temple of Somnath built?

1. Hoysalas
2. Soma Dandanayaka
3. Narasimha
4. Vishnu

Options :

485584146981. 1
485584146982. 2
485584146983. 3
485584146984. 4

Question Number : 2 Question Id : 48558436747 Question Type : MCQ Option Shuffling : No Is Question Mandatory : No Calculator : None Response Time : N.A Think Time : N.A Minimum Instruction Time : 0

Correct Marks : 5 Wrong Marks : 1

Question Key Details :

Key	Value
Comprehension	Comp1

Read the given passage and answer the questions that follow:-

The small village of Somnathpur contains an extraordinary temple, built around AD 1268 by the Hoysalas of Karnataka-one of the most prolific temple builders. Belur and Helebidu are among their better-known works. While these suffered during the invasion of the 14th century, the Somnathpur temple stands more or less intact in near-original condition. This small temple captivates with the beauty and vitality of its detailed sculpture, covering almost every inch of the walls, pillars, and even ceilings. It has three Shikaras and stands on a star-shaped, raised platform with 24 edges. The outer walls have a profusion of detailed carvings: the entire surface run over by carved plaques of stone. There are vertical panels covered by exquisite figures of gods and goddesses, with many incarnations being depicted. There are nymphs too, some carrying an ear of maize, a symbol of plenty and prosperity. The elaborate ornamentation, very characteristic of the Hoysala sculptures, is a remarkable feature. A closer look at the series of friezes on the outer walls reveal intricately carved caparisoned elephants, charging horsemen, stylized flowers, warriors, musicians crocodiles and swans.

The temple was actually commissioned by Sona Dandanayaka or Somnath (who named the village after himself), the minister of the Hoysala king, Narsimha the third. The temple was built to house three forms of Vishnu. The inner centre of the temple was the *kalyanamandapa*. Leading from here are three corridors, each ending in a shrine, one for each form of Vishnu-Venugopala, Janardana and Prasanna Keshava, though only two remain in their original form.

What covers almost every inch of the walls, pillars and even the ceilings?

1. Detailed sculpture
2. Series of friezes
3. Three shikharas
4. Star-shaped, raised platform

Options :

485584146985. 1
485584146986. 2
485584146987. 3
485584146988. 4

Question Number : 3 Question Id : 48558436748 Question Type : MCQ Option Shuffling : No Is Question Mandatory : No Calculator : None Response Time : N.A Think Time : N.A Minimum Instruction Time : 0

Correct Marks : 5 Wrong Marks : 1

Question Key Details :

Key	Value
Comprehension	Comp1

Read the given passage and answer the questions that follow:-

The small village of Somnathpur contains an extraordinary temple, built around AD 1268 by the Hoysalas of Karnataka-one of the most prolific temple builders. Belur and Helebidu are among their better-known works. While these suffered during the invasion of the 14th century, the Somnathpur temple stands more or less intact in near-original condition. This small temple captivates with the beauty and vitality of its detailed sculpture, covering almost every inch of the walls, pillars, and even ceilings. It has three Shikaras and stands on a star-shaped, raised platform with 24 edges. The outer walls have a profusion of detailed carvings: the entire surface run over by carved plaques of stone. There are vertical panels covered by exquisite figures of gods and goddesses, with many incarnations being depicted. There are nymphs too, some carrying an ear of maize, a symbol of plenty and prosperity. The elaborate ornamentation, very characteristic of the Hoysala sculptures, is a remarkable feature. A closer look at the series of friezes on the outer walls reveal intricately carved caparisoned elephants, charging horsemen, stylized flowers, warriors, musicians crocodiles and swans.

The temple was actually commissioned by Sona Dandanayaka or Somnath (who named the village after himself), the minister of the Hoysala king, Narsimha the third. The temple was built to house three forms of Vishnu. The inner centre of the temple was the *kalyanamandapa*. Leading from here are three corridors, each ending in a shrine, one for each form of Vishnu-Venugopala, Janardana and Prasanna Keshava, though only two remain in their original form.

The temple does not have a shrine for which form of Vishnu?

1. Venugopala
2. Narasimha
3. Janardana
4. Prasanna Keshava

Options :

485584146989. 1
485584146990. 2
485584146991. 3
485584146992. 4

Question Number : 4 Question Id : 48558436749 Question Type : MCQ Option Shuffling : No Is Question Mandatory : No Calculator : None Response Time : N.A Think Time : N.A Minimum Instruction Time : 0

Correct Marks : 5 Wrong Marks : 1

Question Key Details :

Key	Value
Comprehension	Comp1

Read the given passage and answer the questions that follow:-

The small village of Somnathpur contains an extraordinary temple, built around AD 1268 by the Hoysalas of Karnataka-one of the most prolific temple builders. Belur and Helebidu are among their better-known works. While these suffered during the invasion of the 14th century, the Somnathpur temple stands more or less intact in near-original condition. This small temple captivates with the beauty and vitality of its detailed sculpture, covering almost every inch of the walls, pillars, and even ceilings. It has three Shikaras and stands on a star-shaped, raised platform with 24 edges. The outer walls have a profusion of detailed carvings: the entire surface run over by carved plaques of stone. There are vertical panels covered by exquisite figures of gods and goddesses, with many incarnations being depicted. There are nymphs too, some carrying an ear of maize, a symbol of plenty and prosperity. The elaborate ornamentation, very characteristic of the Hoysala sculptures, is a remarkable feature. A closer look at the series of friezes on the outer walls reveal intricately carved caparisoned elephants, charging horsemen, stylized flowers, warriors, musicians crocodiles and swans.

The temple was actually commissioned by Sona Dandanayaka or Somnath (who named the village after himself), the minister of the Hoysala king, Narsimha the third. The temple was built to house three forms of Vishnu. The inner centre of the temple was the *kalyanamandapa*. Leading from here are three corridors, each ending in a shrine, one for each form of Vishnu-Venugopala, Janardana and Prasanna Keshava, though only two remain in their original form.

Which among the following is considered a symbol of plenty and prosperity

1. Carved caparisoned elephants and charging horsemen
2. Nymphs carrying an can of maize
3. stylized flowers, warriors and musicians
4. Crocodiles and swans

Options :

485584146993. 1
485584146994. 2
485584146995. 3
485584146996. 4

Question Number : 5 Question Id : 48558436750 Question Type : MCQ Option Shuffling : No Is Question Mandatory : No Calculator : None Response Time : N.A Think Time : N.A Minimum Instruction Time : 0

Correct Marks : 5 Wrong Marks : 1

Question Key Details :

Key	Value
Comprehension	Comp1

Read the given passage and answer the questions that follow:-

The small village of Somnathpur contains an extraordinary temple, built around AD 1268 by the Hoysalas of Karnataka-one of the most prolific temple builders. Belur and Helebidu are among their better-known works. While these suffered during the invasion of the 14th century, the Somnathpur temple stands more or less intact in near-original condition. This small temple captivates with the beauty and vitality of its detailed sculpture, covering almost every inch of the walls, pillars, and even ceilings. It has three Shikaras and stands on a star-shaped, raised platform with 24 edges. The outer walls have a profusion of detailed carvings: the entire surface run over by carved plaques of stone. There are vertical panels covered by exquisite figures of gods and goddesses, with many incarnations being depicted. There are nymphs too, some carrying an ear of maize, a symbol of plenty and prosperity. The elaborate ornamentation, very characteristic of the Hoysala sculptures, is a remarkable feature. A closer look at the series of friezes on the outer walls reveal intricately carved caparisoned elephants, charging horsemen, stylized flowers, warriors, musicians crocodiles and swans.

The temple was actually commissioned by Sona Dandanayaka or Somnath (who named the village after himself), the minister of the Hoysala king, Narsimha the third. The temple was built to house three forms of Vishnu. The inner centre of the temple was the *kalyanamandapa*. Leading from here are three corridors, each ending in a shrine, one for each form of Vishnu-Venugopala, Janardana and Prasanna Keshava, though only two remain in their original form.

Match the words in the List I with their meaning in list II

LIST I (Words)		LIST II (Meanings)	
A.	Caparison	I.	Abundance
B.	Exquisite	II.	An ornamental covering
C.	Frieze	III.	Beautiful and Delicate
D.	Profusion	IV.	Broad Band of decoration

Choose the correct answer from the options given below:

1. A-IV, B-I, C-II, D-III
2. A-III, B-II, C-I, D-IV
3. A-II, B-III, C-IV, D-I
4. A-I, B-IV, C-III, D-II

Options :

485584146997. 1
485584146998. 2
485584146999. 3
485584147000. 4

Sub-Section Number :

2

Sub-Section Id :

4855842706

Question Shuffling Allowed :

No

Is Section Default? :

null

Question Number : 6 Question Id : 48558436751 Question Type : MCQ Option Shuffling : No Is Question Mandatory : No Calculator : None Response Time : N.A Think Time : N.A Minimum Instruction Time : 0

Correct Marks : 5 Wrong Marks : 1

Question Key Details :

Key	Value
Comprehension	Comp2

Read the given passage and answer the questions that follow:-

I had never seen a house on fire before. So, one evening when I heard fire engines with loud alarm bells rushing past my house, I quickly ran out and, a few streets away, joined a large crowd of people, but we could see the fire only from a distance because the police would not allow any one near the building on fire.

What a terrible scene I saw that day. Huge flames of fire were coming out of each floor, and black and thick smoke spread all around. Every now and then tongues of fire would shoot up almost sky-high, sending huge sparks of fire all around.

Three fire engines were busily engaged and the firemen in their dark uniforms were playing the hose on various parts of the building. Then the tall red ladders of the fire engine were stretched upwards and could see some firemen climbing up with hoses in their hands. On reaching almost the top of the ladder, they began to pour floods of water on the topmost part of the building. This continuous flooding brought the fire under control but the building was completely destroyed.

While fire is a blessing in many ways, it can also be a great danger to human life and property.

Match List I with List II with correct noun-adjective pairs as per the passage

LIST I (Noun)		LIST II (Adjective)	
A.	Crowd	I.	Tall
B.	Ladders	II.	Large
C.	Scene	III.	Thick
D.	Smoke	IV.	Terrible

Choose the correct answer from the options given below:

1. A-IV, B-II, C-III, D-I
2. A-II, B-I, C-IV, D-III
3. A-I, B-III, C-IV, D-II
4. A-III, B-IV, C-II, D-I

Options :

- 485584147001. 1
- 485584147002. 2
- 485584147003. 3
- 485584147004. 4

Question Number : 7 Question Id : 48558436752 Question Type : MCQ Option Shuffling : No Is Question Mandatory : No Calculator : None Response Time : N.A Think Time : N.A Minimum Instruction Time : 0

Correct Marks : 5 Wrong Marks : 1

Question Key Details :

Key	Value
Comprehension	Comp2

Read the given passage and answer the questions that follow:-

I had never seen a house on fire before. So, one evening when I heard fire engines with loud alarm bells rushing past my house, I quickly ran out and, a few streets away, joined a large crowd of people, but we could see the fire only from a distance because the police would not allow any one near the building on fire.

What a terrible scene I saw that day. Huge flames of fire were coming out of each floor, and black and thick smoke spread all around. Every now and then tongues of fire would shoot up almost sky-high, sending huge sparks of fire all around.

Three fire engines were busily engaged and the firemen in their dark uniforms were playing the hose on various parts of the building. Then the tall red ladders of the fire engine were stretched upwards and could see some firemen climbing up with hoses in their hands. On reaching almost the top of the ladder, they began to pour floods of water on the topmost part of the building. This continuous flooding brought the fire under control but the building was completely destroyed.

While fire is a blessing in many ways, it can also be a great danger to human life and property.

Choose the odd one out on the basis of your reading of the passage

1. house
2. flames
3. tongues
4. sparks

Options :

- 485584147005. 1
- 485584147006. 2
- 485584147007. 3
- 485584147008. 4

Question Number : 8 Question Id : 48558436753 Question Type : MCQ Option Shuffling : No Is Question Mandatory : No Calculator : None Response Time : N.A Think Time : N.A Minimum Instruction Time : 0

Correct Marks : 5 Wrong Marks : 1

Question Key Details :

Key	Value
Comprehension	Comp2

Read the given passage and answer the questions that follow:-

I had never seen a house on fire before. So, one evening when I heard fire engines with loud alarm bells rushing past my house, I quickly ran out and, a few streets away, joined a large crowd of people, but we could see the fire only from a distance because the police would not allow any one near the building on fire.

What a terrible scene I saw that day. Huge flames of fire were coming out of each floor, and black and thick smoke spread all around. Every now and then tongues of fire would shoot up almost sky-high, sending huge sparks of fire all around.

Three fire engines were busily engaged and the firemen in their dark uniforms were playing the hose on various parts of the building. Then the tall red ladders of the fire engine were stretched upwards and could see some firemen climbing up with hoses in their hands. On reaching almost the top of the ladder, they began to pour floods of water on the topmost part of the building. This continuous flooding brought the fire under control but the building was completely destroyed.

While fire is a blessing in many ways, it can also be a great danger to human life and property.

Why did the narrator run out of his house?

1. His house was on fire
2. He had never seen a fire before
3. The police asked him to
4. There was a large crowd outside his house

Options :

485584147009. 1
485584147010. 2
485584147011. 3
485584147012. 4

Question Number : 9 Question Id : 48558436754 Question Type : MCQ Option Shuffling : No Is Question Mandatory : No Calculator : None Response Time : N.A Think Time : N.A Minimum Instruction Time : 0

Correct Marks : 5 Wrong Marks : 1

Question Key Details :

Key	Value
Comprehension	Comp2

Read the given passage and answer the questions that follow:-

I had never seen a house on fire before. So, one evening when I heard fire engines with loud alarm bells rushing past my house, I quickly ran out and, a few streets away, joined a large crowd of people, but we could see the fire only from a distance because the police would not allow any one near the building on fire.

What a terrible scene I saw that day. Huge flames of fire were coming out of each floor, and black and thick smoke spread all around. Every now and then tongues of fire would shoot up almost sky-high, sending huge sparks of fire all around.

Three fire engines were busily engaged and the firemen in their dark uniforms were playing the hose on various parts of the building. Then the tall red ladders of the fire engine were stretched upwards and could see some firemen climbing up with hoses in their hands. On reaching almost the top of the ladder, they began to pour floods of water on the topmost part of the building. This continuous flooding brought the fire under control but the building was completely destroyed.

While fire is a blessing in many ways, it can also be a great danger to human life and property.

Which of the following images were witnessed by the author?

- A. sky high ladders shooting up
- B. Fireman soaked by rushing water
- C. Busily engaged fire engine
- D. continuous flooding of water
- E. Police in dark uniforms

Choose the correct answer from the options given below:

- 1. A and B only
- 2. B and C only
- 3. C and D only
- 4. D and E only

Options :

- 485584147013. 1
- 485584147014. 2
- 485584147015. 3
- 485584147016. 4

Question Number : 10 Question Id : 48558436755 Question Type : MCQ Option Shuffling : No Is Question Mandatory : No Calculator : None Response Time : N.A Think Time : N.A Minimum Instruction Time : 0

Correct Marks : 5 Wrong Marks : 1

Question Key Details :

Key	Value
Comprehension	Comp2

Read the given passage and answer the questions that follow:-

I had never seen a house on fire before. So, one evening when I heard fire engines with loud alarm bells rushing past my house, I quickly ran out and, a few streets away, joined a large crowd of people, but we could see the fire only from a distance because the police would not allow any one near the building on fire.

What a terrible scene I saw that day. Huge flames of fire were coming out of each floor, and black and thick smoke spread all around. Every now and then tongues of fire would shoot up almost sky-high, sending huge sparks of fire all around.

Three fire engines were busily engaged and the firemen in their dark uniforms were playing the hose on various parts of the building. Then the tall red ladders of the fire engine were stretched upwards and could see some firemen climbing up with hoses in their hands. On reaching almost the top of the ladder, they began to pour floods of water on the topmost part of the building. This continuous flooding brought the fire under control but the building was completely destroyed.

While fire is a blessing in many ways, it can also be a great danger to human life and property.

Rearrange the following sentences to recreate the sequence of events as per the passage

- A. The narrator ran out of the house
- B. The building caught fire
- C. Fireman climbed the ladder
- D. Water soaked the building
- E. The fire was brought under control

Choose the correct answer from the options given below:

- 1. A, B, C, D, E
- 2. A, B, D, C, E
- 3. B, A, C, D, E
- 4. B, A, D, C, E

Options :

- 485584147017. 1
- 485584147018. 2
- 485584147019. 3
- 485584147020. 4

Sub-Section Number : 3
Sub-Section Id : 4855842707
Question Shuffling Allowed : No
Is Section Default? : null

Question Number : 11 Question Id : 48558436756 Question Type : MCQ Option Shuffling : No Is Question Mandatory : No Calculator : None Response Time : N.A Think Time : N.A Minimum Instruction Time : 0

Correct Marks : 5 Wrong Marks : 1

Question Key Details :

Key	Value
Comprehension	Comp3

Read the given passage and answer the questions that follow:-

When I was a small child my grandparents would take me blackberry picking. It was usually late August when the blackberries had fully ripened. Grandad would drive us in his old van. Despite not being comfortable or particularly safe, Grandad's van had a character you would not find in a sleek new car, complete with the latest innovations and a silent engine. Being seven or eight at the time, I always enjoyed a trip as we bounced along to our destination.

My grandparents always chose the same spot. Wild blackberry bushes stretched along the roadside as far as the eye could see in both directions. The road overlooked a small pitch and putt course. On such sunny summer days it was always full. Golfers ambled sedately from hole to hole and the crack of metal striking ball was a constant accompaniment.

Several hours of picking berries ensued. Nana warned me not to eat any until they had all been washed, but turned a knowing blind eye while I gorged anyway. I also helped myself to the occasional unripe red berry as I had a particular taste for anything bitter. The fully immature green berries proved a step too far for even my palate and were merely unpleasant.

When at last we were finished the bright scenery had turned to lengthy shadows and the afternoon had elapsed into evening. Grandad hauled a big bag half full of berries back to the van. Juice bled slowly onto the ground. Nana would later make apple and blackberry tarts and fill several jars with jam. When I reached the van my stomach hurt from too much fruit. My hands stung from constant thorn pricks and were stained dark purple. I always enjoyed those days.

The passage mentions the time of berry picking in different ways. Which of the following are correct?

- A. Late August
- B. Sunny Summer days
- C. Seven or eight a.m
- D. evening

Choose the correct answer from the options given below:

1. D and E only
2. A, B and C only
3. A, B and D only
4. A and B only

Options :

- 485584147021. 1
- 485584147022. 2
- 485584147023. 3
- 485584147024. 4

Question Number : 12 Question Id : 48558436757 Question Type : MCQ Option Shuffling : No Is Question Mandatory : No Calculator : None Response Time : N.A Think Time : N.A Minimum Instruction Time : 0

Correct Marks : 5 Wrong Marks : 1

Question Key Details :

Key	Value
-----	-------

Read the given passage and answer the questions that follow:-

When I was a small child my grandparents would take me blackberry picking. It was usually late August when the blackberries had fully ripened. Grandad would drive us in his old van. Despite not being comfortable or particularly safe, Grandad's van had a character you would not find in a sleek new car, complete with the latest innovations and a silent engine. Being seven or eight at the time, I always enjoyed a trip as we bounced along to our destination.

My grandparents always chose the same spot. Wild blackberry bushes stretched along the roadside as far as the eye could see in both directions. The road overlooked a small pitch and putt course. On such sunny summer days it was always full. Golfers ambled sedately from hole to hole and the crack of metal striking ball was a constant accompaniment.

Several hours of picking berries ensued. Nana warned me not to eat any until they had all been washed, but turned a knowing blind eye while I gorged anyway. I also helped myself to the occasional unripe red berry as I had a particular taste for anything bitter. The fully immature green berries proved a step too far for even my palate and were merely unpleasant.

When at last we were finished the bright scenery had turned to lengthy shadows and the afternoon had elapsed into evening. Grandad hauled a big bag half full of berries back to the van. Juice bled slowly onto the ground. Nana would later make apple and blackberry tarts and fill several jars with jam. When I reached the van my stomach hurt from too much fruit. My hands stung from constant thorn pricks and were stained dark purple. I always enjoyed those days.

Match List I with List II with the verbs in List I to their meanings in List II

LIST I		LIST II	
A.	haul	I.	pass by
B.	elapse	II.	leisurely walk
C.	gorge	III.	eat greedily
D.	amble	IV.	pull or drag with effort

Choose the correct answer from the options given below:

1. A-I, B-II, C-IV, D-III
2. A-IV, B-I, C-III, D-II
3. A-II, B-I, C-III, D-IV
4. A-III, B-II, C-IV, D-I

Options :

485584147025. 1
 485584147026. 2
 485584147027. 3
 485584147028. 4

Question Number : 13 Question Id : 48558436758 Question Type : MCQ Option Shuffling : No Is Question Mandatory : No Calculator : None Response Time : N.A Think Time : N.A Minimum Instruction Time : 0

Correct Marks : 5 Wrong Marks : 1

Question Key Details :

Key	Value
Comprehension	Comp3

Read the given passage and answer the questions that follow:-

When I was a small child my grandparents would take me blackberry picking. It was usually late August when the blackberries had fully ripened. Grandad would drive us in his old van. Despite not being comfortable or particularly safe, Grandad's van had a character you would not find in a sleek new car, complete with the latest innovations and a silent engine. Being seven or eight at the time, I always enjoyed a trip as we bounced along to our destination.

My grandparents always chose the same spot. Wild blackberry bushes stretched along the roadside as far as the eye could see in both directions. The road overlooked a small pitch and putt course. On such sunny summer days it was always full. Golfers ambled sedately from hole to hole and the crack of metal striking ball was a constant accompaniment.

Several hours of picking berries ensued. Nana warned me not to eat any until they had all been washed, but turned a knowing blind eye while I gorged anyway. I also helped myself to the occasional unripe red berry as I had a particular taste for anything bitter. The fully immature green berries proved a step too far for even my palate and were merely unpleasant.

When at last we were finished the bright scenery had turned to lengthy shadows and the afternoon had elapsed into evening. Grandad hauled a big bag half full of berries back to the van. Juice bled slowly onto the ground. Nana would later make apple and blackberry tarts and fill several jars with jam. When I reached the van my stomach hurt from too much fruit. My hands stung from constant thorn pricks and were stained dark purple. I always enjoyed those days.

Which of the following activities according to the passage did the narrator enjoy with his grand parents?

1. Driving in the buses
2. Playing golf
3. Tasting berries
4. Making jams

Options :

- 485584147029. 1
- 485584147030. 2
- 485584147031. 3
- 485584147032. 4

Question Number : 14 Question Id : 48558436759 Question Type : MCQ Option Shuffling : No Is Question Mandatory : No Calculator : None Response Time : N.A Think Time : N.A Minimum Instruction Time : 0

Correct Marks : 5 Wrong Marks : 1

Question Key Details :

Key	Value
-----	-------

Read the given passage and answer the questions that follow:-

When I was a small child my grandparents would take me blackberry picking. It was usually late August when the blackberries had fully ripened. Grandad would drive us in his old van. Despite not being comfortable or particularly safe, Grandad's van had a character you would not find in a sleek new car, complete with the latest innovations and a silent engine. Being seven or eight at the time, I always enjoyed a trip as we bounced along to our destination.

My grandparents always chose the same spot. Wild blackberry bushes stretched along the roadside as far as the eye could see in both directions. The road overlooked a small pitch and putt course. On such sunny summer days it was always full. Golfers ambled sedately from hole to hole and the crack of metal striking ball was a constant accompaniment.

Several hours of picking berries ensued. Nana warned me not to eat any until they had all been washed, but turned a knowing blind eye while I gorged anyway. I also helped myself to the occasional unripe red berry as I had a particular taste for anything bitter. The fully immature green berries proved a step too far for even my palate and were merely unpleasant.

When at last we were finished the bright scenery had turned to lengthy shadows and the afternoon had elapsed into evening. Grandad hauled a big bag half full of berries back to the van. Juice bled slowly onto the ground. Nana would later make apple and blackberry tarts and fill several jars with jam. When I reached the van my stomach hurt from too much fruit. My hands stung from constant thorn pricks and were stained dark purple. I always enjoyed those days.

Choose an appropriate title for the essay

1. Grand parents' Van
2. Green Berries
3. Nana and Me
4. Purple Hands

Options :

485584147033. 1

485584147034. 2

485584147035. 3

485584147036. 4

Question Number : 15 Question Id : 48558436760 Question Type : MCQ Option Shuffling : No Is Question Mandatory : No Calculator : None Response Time : N.A Think Time : N.A Minimum Instruction Time : 0

Correct Marks : 5 Wrong Marks : 1

Question Key Details :

Key	Value
Comprehension	Comp3

Read the given passage and answer the questions that follow:-

When I was a small child my grandparents would take me blackberry picking. It was usually late August when the blackberries had fully ripened. Grandad would drive us in his old van. Despite not being comfortable or particularly safe, Grandad's van had a character you would not find in a sleek new car, complete with the latest innovations and a silent engine. Being seven or eight at the time, I always enjoyed a trip as we bounced along to our destination.

My grandparents always chose the same spot. Wild blackberry bushes stretched along the roadside as far as the eye could see in both directions. The road overlooked a small pitch and putt course. On such sunny summer days it was always full. Golfers ambled sedately from hole to hole and the crack of metal striking ball was a constant accompaniment.

Several hours of picking berries ensued. Nana warned me not to eat any until they had all been washed, but turned a knowing blind eye while I gorged anyway. I also helped myself to the occasional unripe red berry as I had a particular taste for anything bitter. The fully immature green berries proved a step too far for even my palate and were merely unpleasant.

When at last we were finished the bright scenery had turned to lengthy shadows and the afternoon had elapsed into evening. Grandad hauled a big bag half full of berries back to the van. Juice bled slowly onto the ground. Nana would later make apple and blackberry tarts and fill several jars with jam. When I reached the van my stomach hurt from too much fruit. My hands stung from constant thorn pricks and were stained dark purple. I always enjoyed those days.

Which of the following statements are correct as per the passage

- A. Grand father's car was sleek and silent
- B. They always parked at the same spot
- C. The narrator only ate washed berries
- D. The narrator's face was stained dark purple
- E. The narrator's stomach ached when they reached the van

Choose the most appropriate answer from the options given below:

- 1. B and C only
- 2. C and D only
- 3. B and E only
- 4. A and E only

Options :

485584147037. 1

485584147038. 2

485584147039. 3

485584147040. 4

Sub-Section Number :

4

Sub-Section Id :

4855842708

Question Shuffling Allowed :

Yes

Is Section Default? :

null

Question Number : 16 Question Id : 48558436761 Question Type : MCQ Option Shuffling : No Is Question Mandatory : No Calculator : None Response Time : N.A Think Time : N.A Minimum Instruction Time : 0

Correct Marks : 5 Wrong Marks : 1

Question Key Details :

Key	Value
Comprehension	MCQ

Given below is a sentence in the Active voice. Select the most appropriate option of Passive voice of the same:-

He will finish the work in a fortnight:-

- A. The work will be finished by him in a fortnight.
- B. The work would be finished in a fortnight.
- C. In a fortnight, the work is going to finish.
- D. The work will be being finished by him in a fortnight.

Choose the most appropriate answer from the options given below:

- 1. B only
- 2. A only
- 3. C only
- 4. D only

Options :

- 485584147041. 1
- 485584147042. 2
- 485584147043. 3
- 485584147044. 4

Question Number : 17 Question Id : 48558436762 Question Type : MCQ Option Shuffling : No Is Question Mandatory : No Calculator : None Response Time : N.A Think Time : N.A Minimum Instruction Time : 0

Correct Marks : 5 Wrong Marks : 1

Question Key Details :

Key	Value
Comprehension	MCQ

Select the sentences which are correctly used in the Passive form:-

- A. A Cheque was handed over to him by Ram.
- B. He was took to the hospital by Friends.
- C. The town was destroyed by an earthquake.
- D. The teacher will pleased at my work.

Choose the most appropriate answer from the options given below:

- 1. A and C only
- 2. B and C only
- 3. C and D only
- 4. A and D only

Options :

- 485584147045. 1
- 485584147046. 2
- 485584147047. 3
- 485584147048. 4

Question Number : 18 Question Id : 48558436763 Question Type : MCQ Option Shuffling : No Is Question Mandatory : No Calculator : None Response Time : N.A Think Time : N.A Minimum Instruction Time : 0

Correct Marks : 5 Wrong Marks : 1

Question Key Details :

Key	Value
Comprehension	MCQ

Choose the appropriate option of Indirect sentence for the sentence given below:-

He said, "I shall be there with Sudha soon."

- A. He said that he will be there with Sudha soon.
- B. He informed that he would be ne there with Sudha soon.
- C. He said that Sudha would be there with him soon.
- D. He said that he had been with Sudha soon.

Choose the most appropriate answer from the options given below:

- 1. A only
- 2. B and C only
- 3. B only
- 4. A and D only

Options :

- 485584147049. 1
- 485584147050. 2
- 485584147051. 3

485584147052. 4

Question Number : 19 Question Id : 48558436764 Question Type : MCQ Option Shuffling : No Is Question Mandatory : No Calculator : None Response Time : N.A Think Time : N.A Minimum Instruction Time : 0

Correct Marks : 5 Wrong Marks : 1

Question Key Details :

Key	Value
Comprehension	MCQ

Choose the best option of indirect speech for the sentence given:-

Sanjeev said, "I bought a saree for my mother."

- A. Sanjeev said that he had bought a saree for his mother.
- B. Sanjeev said that he was buying a saree for his mother.
- C. Sanjeev said that he had been buying a saree for his mother.
- D. Sanjeev said that he will be buy a saree for his mother.

Choose the most appropriate answer from the options given below:

- 1. D only
- 2. C only
- 3. A only
- 4. B only

Options :

- 485584147053. 1
- 485584147054. 2
- 485584147055. 3
- 485584147056. 4

Question Number : 20 Question Id : 48558436765 Question Type : MCQ Option Shuffling : No Is Question Mandatory : No Calculator : None Response Time : N.A Think Time : N.A Minimum Instruction Time : 0

Correct Marks : 5 Wrong Marks : 1

Question Key Details :

Key	Value
Comprehension	MCQ

Rearrange the following sentences into a meaningful paragraph.

- A. I met a gentleman there.
- B. I was in Hospital for weeks.
- C. One day, he just disappeared.
- D. And I was left wondering.
- E. He helped a lot to console me.

Choose the correct answer from the options given below:

- 1. B, A, E, C, D
- 2. A, B, C, D, E
- 3. C, A, B, D, E
- 4. D, A, E, C, B

Options :

- 485584147057. 1
- 485584147058. 2
- 485584147059. 3
- 485584147060. 4

Question Number : 21 Question Id : 48558436766 Question Type : MCQ Option Shuffling : No Is Question Mandatory : No Calculator : None Response Time : N.A Think Time : N.A Minimum Instruction Time : 0

Correct Marks : 5 Wrong Marks : 1

Question Key Details :

Key	Value
Comprehension	MCQ

Rearrange the given sentences into a meaningful paragraph

- A. Don't attempt any flowery language.
- B. But use simple words and constructions.
- C. The secret of clear writing is clear thinking.
- D. Avoid too much explanation.
- E. If you follow these rules, you will improve.

Choose the correct answer from the options given below:

- 1. A, B, C, D, E
- 2. C, A, B, D, E
- 3. E, B, A, C, D
- 4. E, D, C, B, A

Options :

- 485584147061. 1
- 485584147062. 2
- 485584147063. 3

485584147064. 4

Question Number : 22 Question Id : 48558436767 Question Type : MCQ Option Shuffling : No Is Question Mandatory : No Calculator : None Response Time : N.A Think Time : N.A Minimum Instruction Time : 0

Correct Marks : 5 Wrong Marks : 1

Question Key Details :

Key	Value
Comprehension	MCQ

Choose the best option for the meaning of the given foreign word/phrase

BON APPETIT

1. Wishing someone an enjoyable meal.
2. Warning someone before meal.
3. Inviting someone for a meal.
4. Ordering for a meal.

Options :

- 485584147065. 1
- 485584147066. 2
- 485584147067. 3
- 485584147068. 4

Question Number : 23 Question Id : 48558436768 Question Type : MCQ Option Shuffling : No Is Question Mandatory : No Calculator : None Response Time : N.A Think Time : N.A Minimum Instruction Time : 0

Correct Marks : 5 Wrong Marks : 1

Question Key Details :

Key	Value
Comprehension	MCQ

Choose the best option for the given expression:- in the mean while

1. adieu
2. ad interim
3. adios
4. ad infinitum

Options :

- 485584147069. 1
- 485584147070. 2
- 485584147071. 3
- 485584147072. 4

Question Number : 24 Question Id : 48558436769 Question Type : MCQ Option Shuffling : No Is Question Mandatory : No Calculator : None Response Time : N.A Think Time : N.A Minimum Instruction Time : 0

Correct Marks : 5 Wrong Marks : 1

Question Key Details :

Key	Value
Comprehension	MCQ

Match the words in List I with their meaning in List II

LIST I		LIST II	
Words		Meaning	
A.	Adjourn	I.	Stick fast to
B.	Adhere	II.	Work jointly on a project
C.	Collaborate	III.	Break off to resume late
D.	Collide	IV.	hit by accident

Choose the correct answer from the options given below:

1. A-III, B-I, C-II, D-IV
2. A-II, B-III, C-I, D-IV
3. A-I, B-IV, C-II, D-III
4. A-IV, B-III, C-II, D-I

Options :

485584147073. 1
 485584147074. 2
 485584147075. 3
 485584147076. 4

Question Number : 25 Question Id : 48558436770 Question Type : MCQ Option Shuffling : No Is Question Mandatory : No Calculator : None Response Time : N.A Think Time : N.A Minimum Instruction Time : 0

Correct Marks : 5 Wrong Marks : 1

Question Key Details :

Key	Value
Comprehension	MCQ

Replace the underlined word/phrase, choosing the best option from the ones given below:-

Her hand-writing is not clear enough to be read

1. Legible
2. Illegible
3. Eligible Elite
4. ELite

Options :

485584147077. 1
 485584147078. 2
 485584147079. 3

Question Number : 26 Question Id : 48558436771 Question Type : MCQ Option Shuffling : No Is Question Mandatory : No Calculator : None Response Time : N.A Think Time : N.A Minimum Instruction Time : 0

Correct Marks : 5 Wrong Marks : 1

Question Key Details :

Key	Value
Comprehension	MCQ

Select the sentence in which articles have been used appropriately:-

- A. There is a policeman at the door.
- B. Some children suffer from a fear of the dark.
- C. He has the good knowledge of English.
- D. Tea we got on the bus, was cold.
- E. He sent for a umbrella.

Choose the most appropriate answer from the options given below:

- 1. A and C only
- 2. B and D only
- 3. A and B only
- 4. B, D and E only

Options :

- 485584147081. 1
- 485584147082. 2
- 485584147083. 3
- 485584147084. 4

Question Number : 27 Question Id : 48558436772 Question Type : MCQ Option Shuffling : No Is Question Mandatory : No Calculator : None Response Time : N.A Think Time : N.A Minimum Instruction Time : 0

Correct Marks : 5 Wrong Marks : 1

Question Key Details :

Key	Value
Comprehension	MCQ

Fill the appropriate article/determiner in the given sentence choosing from the given options below:-

Gaurav is _____ honorable lawyer who has _____ good reputation.

- 1. The, A
- 2. An, The
- 3. A, The
- 4. An, A

Options :

- 485584147085. 1

485584147086. 2
485584147087. 3
485584147088. 4

Question Number : 28 Question Id : 48558436773 Question Type : MCQ Option Shuffling : No Is Question Mandatory : No Calculator : None Response Time : N.A Think Time : N.A Minimum Instruction Time : 0

Correct Marks : 5 Wrong Marks : 1

Question Key Details :

Key	Value
Comprehension	MCQ

Choose the best option to convert the given sentence from Affirmative to Exclamatory:-

'These mangoes have a delicious flavour'.

1. What a delicious flavour these mangoes have!
2. Oh, what a delicious flavour of mangoes!
3. Alas! The mangoes have delicious flavour
4. These mangoes are delicious, no don't!

Options :

485584147089. 1
485584147090. 2
485584147091. 3
485584147092. 4

Question Number : 29 Question Id : 48558436774 Question Type : MCQ Option Shuffling : No Is Question Mandatory : No Calculator : None Response Time : N.A Think Time : N.A Minimum Instruction Time : 0

Correct Marks : 5 Wrong Marks : 1

Question Key Details :

Key	Value
Comprehension	MCQ

Choose the best option to convert the given Exclamatory sentence into an Assertive sentence:-

If only I had a good car!

1. I wish to have good car just now.
2. I feel sorry not to have a good car.
3. I wish I had a good car.
4. I wish you had a good car.

Options :

485584147093. 1
485584147094. 2
485584147095. 3
485584147096. 4

Question Number : 30 Question Id : 48558436775 Question Type : MCQ Option Shuffling : No Is Question Mandatory : No Calculator : None Response Time : N.A Think Time : N.A Minimum Instruction Time : 0

Correct Marks : 5 Wrong Marks : 1

Question Key Details :

Key	Value
Comprehension	MCQ

Choose the most appropriate preposition to fill up the blanks:-

The holy tree is associated _____ the happiness _____ people

1. to, with
2. with, off
3. with, of
4. to, with

Options :

485584147097. 1
485584147098. 2
485584147099. 3
485584147100. 4

Question Number : 31 Question Id : 48558436776 Question Type : MCQ Option Shuffling : No Is Question Mandatory : No Calculator : None Response Time : N.A Think Time : N.A Minimum Instruction Time : 0

Correct Marks : 5 Wrong Marks : 1

Question Key Details :

Key	Value
Comprehension	MCQ

Fill in the correct preposition in sentences of List I choosing from List II

LIST I		LIST II	
A.	He started __ six _____ the morning.	I.	into, for
B.	She rushed _____ my room gasping ____ breath	II.	In, at
C.	_____ his work, Ravi after he ___ missing part	III.	to, on
D.	He goes _____ office _____ foot.	IV.	at, in

Choose the correct answer from the options given below:

1. A-IV, B-I, C-II, D-III
2. A-III, B-II, C-I, D-IV
3. A-II, B-III, C-I, D-IV
4. A-I, B-II, C-III, D-IV

Options :

485584147101. 1
485584147102. 2
485584147103. 3
485584147104. 4

Question Number : 32 Question Id : 48558436777 Question Type : MCQ Option Shuffling : No Is Question Mandatory : No Calculator : None Response Time : N.A Think Time : N.A Minimum Instruction Time : 0

Correct Marks : 5 Wrong Marks : 1

Question Key Details :

Key	Value
Comprehension	MCQ

Which ones of the given words are not used as Modals?

- A. Ought
- B. must
- C. does
- D. should
- E. doesn't

Choose the correct answer from the options given below:

- 1. C and E only
- 2. A, C and D
- 3. A and D only
- 4. C and E only

Options :

485584147105. 1
485584147106. 2
485584147107. 3
485584147108. 4

Question Number : 33 Question Id : 48558436778 Question Type : MCQ Option Shuffling : No Is Question Mandatory : No Calculator : None Response Time : N.A Think Time : N.A Minimum Instruction Time : 0

Correct Marks : 5 Wrong Marks : 1

Question Key Details :

Key	Value
Comprehension	MCQ

Fill in the most appropriate Modal in the given sentence from the given options:-

She wondered if that _____ be true.

1. would
2. could
3. was
4. had been

Options :

485584147109. 1
485584147110. 2
485584147111. 3
485584147112. 4

Question Number : 34 Question Id : 48558436779 Question Type : MCQ Option Shuffling : No Is Question Mandatory : No Calculator : None Response Time : N.A Think Time : N.A Minimum Instruction Time : 0

Correct Marks : 5 Wrong Marks : 1

Question Key Details :

Key	Value
Comprehension	MCQ

Choose the best option to complete the statement:-

The position of salutation in a letter is at the _____

1. left-hand of the first page
2. right-hand on the first page
3. below the main body of letter
4. above the heading of the letter

Options :

485584147113. 1
485584147114. 2
485584147115. 3
485584147116. 4

Question Number : 35 Question Id : 48558436780 Question Type : MCQ Option Shuffling : No Is Question Mandatory : No Calculator : None Response Time : N.A Think Time : N.A Minimum Instruction Time : 0

Correct Marks : 5 Wrong Marks : 1

Question Key Details :

Key	Value
Comprehension	MCQ

Which of the following is an example of subscription in a letter?

1. 12 A, Modal Town
2. Dear Sir
3. Requesting issue of duplicate Driver's Licence
4. Yours faithfully

Options :

485584147117. 1
485584147118. 2
485584147119. 3
485584147120. 4

Question Number : 36 Question Id : 48558436781 Question Type : MCQ Option Shuffling : No Is Question Mandatory : No Calculator : None Response Time : N.A Think Time : N.A Minimum Instruction Time : 0

Correct Marks : 5 Wrong Marks : 1

Question Key Details :

Key	Value
Comprehension	MCQ

Read the sentence to find out if there is an error and choose the corresponding answer

- A. The solution
- B. which he provided
- C. does not hint the
- D. possibility of
- E. an alternative answer

Choose the correct answer from the options given below:

1. B only
2. C only
3. D only
4. E only

Options :

485584147121. 1
485584147122. 2
485584147123. 3
485584147124. 4

Question Number : 37 Question Id : 48558436782 Question Type : MCQ Option Shuffling : No Is Question Mandatory : No Calculator : None Response Time : N.A Think Time : N.A Minimum Instruction Time : 0

Correct Marks : 5 Wrong Marks : 1

Question Key Details :

Key	Value
-----	-------

Read the sentence to find out if there is an error and choose the corresponding answer

- A. Climatic shifts are
- B. so gradual they can be
- C. indistinguishable at first
- D. from ordinary fluctuations
- E. in the weather

Choose the correct answer from the options given below:

- 1. B only
- 2. C only
- 3. D only
- 4. E only

Options :

- 485584147125. 1
- 485584147126. 2
- 485584147127. 3
- 485584147128. 4

Question Number : 38 Question Id : 48558436783 Question Type : MCQ Option Shuffling : No Is Question Mandatory : No Calculator : None Response Time : N.A Think Time : N.A Minimum Instruction Time : 0

Correct Marks : 5 Wrong Marks : 1

Question Key Details :

Key	Value
Comprehension	MCQ

Match List I with List II to complete the sentences meaningfully

LIST I		LIST II	
A.	Prices have _____	I.	went off
B.	This application was	II.	come down
C.	The bomb _____	III.	turned down
D.	The meeting has been ____	IV.	put off

Choose the correct answer from the options given below:

- 1. A-III, B-IV, C-II, D-I
- 2. A-I, B-II, C-IV, D-III
- 3. A-II, B-III, C-I, D-IV
- 4. A-IV, B-I, C-III, D-II

Options :

- 485584147129. 1

485584147130. 2
485584147131. 3
485584147132. 4

Question Number : 39 Question Id : 48558436784 Question Type : MCQ Option Shuffling : No Is Question Mandatory : No Calculator : None Response Time : N.A Think Time : N.A Minimum Instruction Time : 0

Correct Marks : 5 Wrong Marks : 1

Question Key Details :

Key	Value
Comprehension	MCQ

Match the Phrasal verb in List I with the correct meaning in List II

LIST I		LIST II	
A.	Call off	I.	Visit
B.	Call on	II.	Request
C.	Call out	III.	cancel
D.	Call for	IV.	Challenge

Choose the correct answer from the options given below:

1. A-I, B-II, C-II, D-IV
2. A-II, B-IV, C-I, D-III
3. A-IV, B-III, C-II, D-I
4. A-III, B-I, C-IV, D-II

Options :

485584147133. 1
485584147134. 2
485584147135. 3
485584147136. 4

Question Number : 40 Question Id : 48558436785 Question Type : MCQ Option Shuffling : No Is Question Mandatory : No Calculator : None Response Time : N.A Think Time : N.A Minimum Instruction Time : 0

Correct Marks : 5 Wrong Marks : 1

Question Key Details :

Key	Value
Comprehension	MCQ

Identify the pair of words which are not homonyms:-

- A. Birth-Berth
- B. Dew-Due
- C. Ant-Aunt
- D. Elicit-Illicit
- E. Pair-Pear

Choose the correct answer from the options given below:

- 1. D and E only
- 2. A and B only
- 3. A, C and E only
- 4. C and D only

Options :

- 485584147137. 1
- 485584147138. 2
- 485584147139. 3
- 485584147140. 4

Question Number : 41 Question Id : 48558436786 Question Type : MCQ Option Shuffling : No Is Question Mandatory : No Calculator : None Response Time : N.A Think Time : N.A Minimum Instruction Time : 0

Correct Marks : 5 Wrong Marks : 1

Question Key Details :

Key	Value
Comprehension	MCQ

Rearrange the given phrases in to a meaningful sentence.

- A. Enriching his mind with ideas.
- B. And in these ways, he is always.
- C. gets people to stalk.
- D. A writer reads, observes and

Choose the most appropriate answer from the options given below:

- 1. A, C, D, B only
- 2. D, C, B, A only
- 3. A, B, C, D only
- 4. B, A, D, C only

Options :

- 485584147141. 1
- 485584147142. 2
- 485584147143. 3
- 485584147144. 4

Question Number : 42 Question Id : 48558436787 Question Type : MCQ Option Shuffling : No Is Question Mandatory : No Calculator : None Response Time : N.A Think Time : N.A Minimum Instruction Time : 0

Correct Marks : 5 Wrong Marks : 1

Question Key Details :

Key	Value
Comprehension	MCQ

Match the words of List I with their antonyms in List II

LIST I		LIST II	
words		Antonyms	
A.	Virtuous	I.	Imprison
B.	Liberate	II.	Ignorance
C.	Orderly	III.	Vicious
D.	Knowledge	IV.	Haphazard

Choose the correct answer from the options given below:

1. A-I, B-UV, C-III, D-II
2. A-II, B-III, C-I, D-IV
3. A-III, B-I, C-IV, D-II
4. A-IV, B-III, C-II, D-I

Options :

- 485584147145. 1
- 485584147146. 2
- 485584147147. 3
- 485584147148. 4

Question Number : 43 Question Id : 48558436788 Question Type : MCQ Option Shuffling : No Is Question Mandatory : No Calculator : None Response Time : N.A Think Time : N.A Minimum Instruction Time : 0

Correct Marks : 5 Wrong Marks : 1

Question Key Details :

Key	Value
Comprehension	MCQ

Choose the correct word from the given option that is an antonym of the underlined word:-

Rajni is very arrogant but her sister

Namrata is very _____.

1. Wise
2. Humble
3. Timid
4. Shrewd

Options :

485584147149. 1
485584147150. 2
485584147151. 3
485584147152. 4

Question Number : 44 Question Id : 48558436789 Question Type : MCQ Option Shuffling : No Is Question Mandatory : No Calculator : None Response Time : N.A Think Time : N.A Minimum Instruction Time : 0

Correct Marks : 5 Wrong Marks : 1

Question Key Details :

Key	Value
Comprehension	MCQ

Choose the correct 'adverb' to complete the given sentence:-

The patient fought very _____ to survive.

1. hardly
2. hard
3. hardness
4. hard and fast

Options :

485584147153. 1
485584147154. 2
485584147155. 3
485584147156. 4

Question Number : 45 Question Id : 48558436790 Question Type : MCQ Option Shuffling : No Is Question Mandatory : No Calculator : None Response Time : N.A Think Time : N.A Minimum Instruction Time : 0

Correct Marks : 5 Wrong Marks : 1

Question Key Details :

Key	Value
Comprehension	MCQ

Which ones of the given words are not the adverbs:-

- A. Already
- B. Greedy
- C. Certainly
- D. Scarce
- E. often

Choose the most appropriate answer from the options given below:

- 1. A, B and D only
- 2. A and C only
- 3. B and D only
- 4. C, D and E only

Options :

- 485584147157. 1
- 485584147158. 2
- 485584147159. 3
- 485584147160. 4

Question Number : 46 Question Id : 48558436791 Question Type : MCQ Option Shuffling : No Is Question Mandatory : No Calculator : None Response Time : N.A Think Time : N.A Minimum Instruction Time : 0

Correct Marks : 5 Wrong Marks : 1

Question Key Details :

Key	Value
Comprehension	MCQ

Choose the appropriate question tag from the given options to complete the given sentence

Most of us will join the party, _____ ?

- 1. aren't we
- 2. wouldn't we
- 3. won't we
- 4. shall we

Options :

- 485584147161. 1
- 485584147162. 2
- 485584147163. 3
- 485584147164. 4

Question Number : 47 Question Id : 48558436792 Question Type : MCQ Option Shuffling : No Is Question Mandatory : No Calculator : None Response Time : N.A Think Time : N.A Minimum Instruction Time : 0

Correct Marks : 5 Wrong Marks : 1

Question Key Details :

Key	Value
Comprehension	MCQ

Which one of the given sentences is not grammatically correct?

1. Copper is a useful metal.
2. She came while the meeting was over.
3. This is the house where I lived for ten years.
4. The doctor discharged the patient from the hospital.

Options :

485584147165. 1
 485584147166. 2
 485584147167. 3
 485584147168. 4

Question Number : 48 Question Id : 48558436793 Question Type : MCQ Option Shuffling : No Is Question Mandatory : No Calculator : None Response Time : N.A Think Time : N.A Minimum Instruction Time : 0

Correct Marks : 5 Wrong Marks : 1

Question Key Details :

Key	Value
Comprehension	MCQ

Match the idioms of List I with their meaning in List II

LIST I		LIST II	
Idioms		Meaning	
A.	To muddle through	I.	anger and resentment
B.	To face the music	II.	to work in a confused way
C.	In the doldrums	III.	to accept the consequences
D.	Foam and Froth	IV.	in trouble

Choose the correct answer from the options given below:

1. A-I, B-II, C-III, D-IV
2. A-III, B-IV, C-I, D-II
3. A-IV, B-I, C-III, D-II
4. A-II, B-III, C-IV, D-I

Options :

485584147169. 1
 485584147170. 2
 485584147171. 3
 485584147172. 4

Question Number : 49 Question Id : 48558436794 Question Type : MCQ Option Shuffling : No Is Question Mandatory : No Calculator : None Response Time : N.A Think Time : N.A Minimum Instruction Time : 0

Correct Marks : 5 Wrong Marks : 1

Question Key Details :

Key	Value
Comprehension	MCQ

Choose the appropriate idiom to replace the underlined part of sentence.

He has taken his loss so seriously that he fell sick.

1. taken to heart
2. take the bull by its horns
3. put in his mind
4. taken off and on

Options :

- 485584147173. 1
- 485584147174. 2
- 485584147175. 3
- 485584147176. 4

Question Number : 50 Question Id : 48558436795 Question Type : MCQ Option Shuffling : No Is Question Mandatory : No Calculator : None Response Time : N.A Think Time : N.A Minimum Instruction Time : 0

Correct Marks : 5 Wrong Marks : 1

Question Key Details :

Key	Value
Comprehension	MCQ

Fill in the blank with the most suitable option from the words given below.

The students _____ came late to the class, have missed out on some important concepts.

1. who
2. which
3. whom
4. whose

Options :

- 485584147177. 1
- 485584147178. 2
- 485584147179. 3
- 485584147180. 4

General Test

Group Number :

Group Id : 485584828
Group Maximum Duration : 60
Group Minimum Duration : 60
Show Attended Group? : No
Edit Attended Group? : No
Break time : 0
Group Marks : 250
Is this Group for Examiner? : No
Examiner permission : Cant View
Show Progress Bar? : No

General Test

Section Id : 485584952
Section Number : 1
Section type : Online
Mandatory or Optional : Mandatory
Number of Questions : 60
Number of Questions to be attempted : 50
Section Marks : 250
Enable Mark as Answered Mark for Review and Clear Response : Yes
Maximum Instruction Time : 0
Sub-Section Number : 1
Sub-Section Id : 4855842709
Question Shuffling Allowed : Yes
Is Section Default? : null

Question Number : 51 Question Id : 48558436686 Question Type : MCQ Option Shuffling : No Is Question Mandatory : No Calculator : None Response Time : N.A Think Time : N.A Minimum Instruction Time : 0

Correct Marks : 5 Wrong Marks : 1

Question Key Details :

Key	Value
Comprehension	MCQ

Divyansh's age is in the ratio 9:10 to the age of his sister Sara. Ten years ago, the ratio of their ages was 4:5. What is present age of Divyansh?

1. 20 years
2. 18 years
3. 28 years
4. 22 years

Options :

485584146741. 1
485584146742. 2
485584146743. 3
485584146744. 4

Question Number : 51 Question Id : 48558436686 Question Type : MCQ Option Shuffling : No Is Question Mandatory : No Calculator : None Response Time : N.A Think Time : N.A Minimum Instruction Time : 0

Correct Marks : 5 Wrong Marks : 1

Question Key Details :

Key	Value
Comprehension	MCQ

दिव्यांश की आयु और उसकी बहन सारा की आयु में अनुपात 9:10 है। 10 वर्ष पहले, उनकी आयु में अनुपात 4:5 था। दिव्यांश की वर्तमान आयु क्या है?

1. 20 वर्ष
2. 18 वर्ष
3. 28 वर्ष
4. 22 वर्ष

Options :

485584146741. 1
485584146742. 2
485584146743. 3
485584146744. 4

Question Number : 51 Question Id : 48558436686 Question Type : MCQ Option Shuffling : No Is Question Mandatory : No Calculator : None Response Time : N.A Think Time : N.A Minimum Instruction Time : 0

Correct Marks : 5 Wrong Marks : 1

Question Key Details :

Key	Value
Comprehension	MCQ

দিব্যাংশৰ বৰ্তমান বয়সৰ লগত তাৰ বায়েকৰ বয়সৰ অনুপাত 9:10 আৰু দহ বছৰ আগতে সিহঁতৰ বয়সৰ অনুপাতটো 4:5 আছিল। বৰ্তমান দিব্যাংশৰ বয়স কিমান?

1. 20 বছৰ
2. 18 বছৰ
3. 28 বছৰ
4. 22 বছৰ

Options :

485584146741. 1
485584146742. 2
485584146743. 3
485584146744. 4

Question Number : 51 Question Id : 48558436686 Question Type : MCQ Option Shuffling : No Is Question Mandatory : No Calculator : None Response Time : N.A Think Time : N.A Minimum Instruction Time : 0

Correct Marks : 5 Wrong Marks : 1

Question Key Details :

Key	Value
Comprehension	MCQ

দিব্যাংশ এবং তার বোনের বয়সের অনুপাত 9:10। দশ বছর আগে তাদের বয়সের অনুপাত ছিল 4:5। তাহলে বর্তমানে দিব্যাংশের বয়স কত?

1. 20 বছর
2. 18 বছর
3. 28 বছর
4. 22 বছর

Options :

485584146741. 1
485584146742. 2
485584146743. 3
485584146744. 4

Question Number : 51 Question Id : 48558436686 Question Type : MCQ Option Shuffling : No Is Question Mandatory : No Calculator : None Response Time : N.A Think Time : N.A Minimum Instruction Time : 0

Correct Marks : 5 Wrong Marks : 1

Question Key Details :

Key	Value
Comprehension	MCQ

দ্বিবাংশনী ঔমর তেনী অঙেন আসারানী ঔমরনা 9:10 না গুণ্ডীতরমাং ঔ. 10 বর্ষ পঙেবা তেমনী ঔমরনী গুণ্ডীতর 4:5 হতী. তী দ্বিবাংশনী হাবনী ঔমর শীঘী ?

1. 20 বর্ষ
2. 18 বর্ষ
3. 28 বর্ষ
4. 22 বর্ষ

Options :

485584146741. 1
485584146742. 2
485584146743. 3
485584146744. 4

Question Number : 51 Question Id : 48558436686 Question Type : MCQ Option Shuffling : No Is Question Mandatory : No Calculator : None Response Time : N.A Think Time : N.A Minimum Instruction Time : 0

Correct Marks : 5 Wrong Marks : 1

Question Key Details :

Key	Value
Comprehension	MCQ

ದಿವ್ಯಾಂಶನ ವಯಸ್ಸು ತನ್ನ ಸಹೋದರಿ ಸಾರಾಗೆ 9:10 ರ ಅನುಪಾತದಲ್ಲಿದೆ. ಹತ್ತು ವರ್ಷಗಳ ಹಿಂದೆ ಅವರ ವಯಸ್ಸಿನ ಅನುಪಾತವು 4:5 ರಷ್ಟಿತ್ತು. ದಿವ್ಯಾಂಶನ ಪ್ರಸ್ತುತ ವಯಸ್ಸೆಷ್ಟು?

1. 20 ವರ್ಷಗಳು
2. 18 ವರ್ಷಗಳು
3. 28 ವರ್ಷಗಳು
4. 22 ವರ್ಷಗಳು

Options :

485584146741. 1
485584146742. 2
485584146743. 3
485584146744. 4

Question Number : 51 Question Id : 48558436686 Question Type : MCQ Option Shuffling : No Is Question Mandatory : No Calculator : None Response Time : N.A Think Time : N.A Minimum Instruction Time : 0

Correct Marks : 5 Wrong Marks : 1

Question Key Details :

Key	Value
Comprehension	MCQ

ദിവ്യാൻഷിന്റേയും അയാളുടെ സഹോദരി സാറായുടേയും വയസ്സിന്റെ അനുപാതം 9:10 ആണ് . 10 വർഷം മുമ്പ് അത് 4:5 ആയിരുന്നു. എങ്കിൽ ദിവ്യാൻഷിന്റെ ഇപ്പോഴത്തെ പ്രായം എത്ര ?

1. 20 വയസ്സ്
2. 18 വയസ്സ്
3. 28 വയസ്സ്
4. 22 വയസ്സ്

Options :

485584146741. 1
485584146742. 2
485584146743. 3
485584146744. 4

Question Number : 51 Question Id : 48558436686 Question Type : MCQ Option Shuffling : No Is Question Mandatory : No Calculator : None Response Time : N.A Think Time : N.A Minimum Instruction Time : 0

Correct Marks : 5 Wrong Marks : 1

Question Key Details :

Key	Value
Comprehension	MCQ

दिव्यांश व त्याची बहिण सारा यांच्या वयाचे गुणोत्तर 9:10 आहे. दहा वर्षापूर्वी दोघांच्या वयाचे गुणोत्तर 4:5 असे होते, तर आजचे दिव्यांशचे वय किती?

1. 20 वर्षे
2. 18 वर्षे
3. 28 वर्षे
4. 22 वर्षे

Options :

485584146741. 1
485584146742. 2
485584146743. 3
485584146744. 4

Question Number : 51 Question Id : 48558436686 Question Type : MCQ Option Shuffling : No Is Question Mandatory : No Calculator : None Response Time : N.A Think Time : N.A Minimum Instruction Time : 0

Correct Marks : 5 Wrong Marks : 1

Question Key Details :

Key	Value
Comprehension	MCQ

दिव्यांशर वयस, तार लललल सारल वयस ससलत अनुघलत 9:10 । दल वसस घुवे सललललल वयसर अनुघलत 4:5 थुल। दिव्यांशर वलललल वयस लेते?

1. 20 वसस
2. 18 वसस
3. 28 वसस
4. 22 वसस

Options :

485584146741. 1
485584146742. 2
485584146743. 3
485584146744. 4

Question Number : 51 Question Id : 48558436686 Question Type : MCQ Option Shuffling : No Is Question Mandatory : No Calculator : None Response Time : N.A Think Time : N.A Minimum Instruction Time : 0

Correct Marks : 5 Wrong Marks : 1

Question Key Details :

Key	Value
Comprehension	MCQ

ਦਿਵਿਆਂਸ਼ ਦੀ ਉਮਰ ਉਸਦੀ ਭੈਣ ਸਾਰਾ ਦੀ ਉਮਰ ਦੇ ਅਨੁਪਾਤ 9:10 ਵਿੱਚ ਹੈ। 10 ਸਾਲ ਪਹਿਲਾਂ ਉਨ੍ਹਾਂ ਦੀ ਉਮਰ ਦਾ ਅਨੁਪਾਤ 4:5 ਸੀ। ਦਿਵਿਆਂਸ਼ ਦੀ ਮੌਜੂਦਾ ਉਮਰ ਕਿੰਨੀ ਹੈ?

1. 20 ਸਾਲ
2. 18 ਸਾਲ
3. 28 ਸਾਲ
4. 22 ਸਾਲ

Options :

485584146741. 1
485584146742. 2
485584146743. 3
485584146744. 4

Question Number : 51 Question Id : 48558436686 Question Type : MCQ Option Shuffling : No Is Question Mandatory : No Calculator : None Response Time : N.A Think Time : N.A Minimum Instruction Time : 0

Correct Marks : 5 Wrong Marks : 1

Question Key Details :

Key	Value
Comprehension	MCQ

ਤ੍ਰਿਵੰਯਾਨੰਸ਼ੁ ਮਠ੍ਰੁਮੁ ਅਵਰਤੁ ਸਕੋਠਾਰੀ ਸਾਰਾਵਿਨੰ ਵਯਤੁ 9:10 ਏਨ੍ਰ ਵਕਿਤਠ੍ਰਿਲੁ ਏਨ੍ਰਠ੍ਰੁ. ਪਠ੍ਰੁ ਆਨੰਡੁਕਨ੍ਰੁਕੁ ਮੁਨੰਪੁ, ਅਵਰਕਨ੍ਰਿਨੰ ਵਯਤੁ ਵਕਿਠ੍ਰੁ 4:5. ਏਨ੍ਰਿਲੁ ਤ੍ਰਿਵੰਯਾਨੰਸ਼ਿਨੰ ਠ੍ਰੁਪੋਠ੍ਰੁਠ੍ਰੁ ਵਯਤੁ ਏਨ੍ਰਨੰ?

1. 20 ਵਯਤੁ
2. 18 ਵਯਤੁ
3. 28 ਵਯਤੁ
4. 22 ਵਯਤੁ

Options :

485584146741. 1
485584146742. 2
485584146743. 3
485584146744. 4

Question Number : 51 Question Id : 48558436686 Question Type : MCQ Option Shuffling : No Is Question Mandatory : No Calculator : None Response Time : N.A Think Time : N.A Minimum Instruction Time : 0

Correct Marks : 5 Wrong Marks : 1

Question Key Details :

Key	Value
Comprehension	MCQ

దివ్యాన్ల వయస్సు అతని సోదరి సారా వయస్సు 9:10 నిష్పత్తిలో ఉన్నాయి. పది సంవత్సరాల క్రితం వారి వయస్సుల నిష్పత్తి 4:5. దివ్యాన్ల ప్రస్తుత వయస్సు ఎంత?

1. 20 సంవత్సరాలు
2. 18 సంవత్సరాలు
3. 28 సంవత్సరాలు
4. 22 సంవత్సరాలు

Options :

485584146741. 1
485584146742. 2
485584146743. 3
485584146744. 4

Question Number : 51 Question Id : 48558436686 Question Type : MCQ Option Shuffling : No Is Question Mandatory : No Calculator : None Response Time : N.A Think Time : N.A Minimum Instruction Time : 0

Correct Marks : 5 Wrong Marks : 1

Question Key Details :

Key	Value
Comprehension	MCQ

دیوانش کی عمر، اپنی بہن سارہ کی نسبت 9:10 کے تناسب میں ہے۔ دس سال پہلے ان کی عمروں کا تناسب 4:5 تھا۔ دیوانش کی موجودہ عمر کیا ہے؟

1. 20 سال
2. 18 سال
3. 28 سال
4. 22 سال

Options :

485584146741. 1
485584146742. 2
485584146743. 3
485584146744. 4

Question Number : 52 Question Id : 48558436687 Question Type : MCQ Option Shuffling : No Is Question Mandatory : No Calculator : None Response Time : N.A Think Time : N.A Minimum Instruction Time : 0

Correct Marks : 5 Wrong Marks : 1

Question Key Details :

Key	Value
Comprehension	MCQ

If we divide a sum of ₹ 455 in the ratio 4:3, the larger share (in ₹) is :

1. 235
2. 260
3. 195
4. 175

Options :

485584146745. 1
485584146746. 2
485584146747. 3
485584146748. 4

Question Number : 52 Question Id : 48558436687 Question Type : MCQ Option Shuffling : No Is Question Mandatory : No Calculator : None Response Time : N.A Think Time : N.A Minimum Instruction Time : 0

Correct Marks : 5 Wrong Marks : 1

Question Key Details :

Key	Value
Comprehension	MCQ

यदि हम ₹ 455 को 4:3 के अनुपात में बाँटें, तो बड़ा भाग (₹ में) कितना होगा?

1. 235
2. 260
3. 195
4. 175

Options :

485584146745. 1
485584146746. 2
485584146747. 3
485584146748. 4

Question Number : 52 Question Id : 48558436687 Question Type : MCQ Option Shuffling : No Is Question Mandatory : No Calculator : None Response Time : N.A Think Time : N.A Minimum Instruction Time : 0

Correct Marks : 5 Wrong Marks : 1

Question Key Details :

Key	Value
Comprehension	MCQ

যদি ₹ 455 ধনবাশিক 4:3 অনুপাতত ভাগ কৰা হয়, তেন্তে তাৰ বৃহত্তৰ অংশটো হ'ব (হ-ত) :

1. 235

2. 260

3. 195

4. 175

Options :

485584146745. 1

485584146746. 2

485584146747. 3

485584146748. 4

Question Number : 52 Question Id : 48558436687 Question Type : MCQ Option Shuffling : No Is Question Mandatory : No Calculator : None Response Time : N.A Think Time : N.A Minimum Instruction Time : 0

Correct Marks : 5 Wrong Marks : 1

Question Key Details :

Key	Value
Comprehension	MCQ

যদি আমৰা 4:3 অনুপাতে 455 এৰ যোগফলকে ভাগ কৰি, তাহলে বড় অংশটি হবে:

1. 235

2. 260

3. 195

4. 175

Options :

485584146745. 1

485584146746. 2

485584146747. 3

485584146748. 4

Question Number : 52 Question Id : 48558436687 Question Type : MCQ Option Shuffling : No Is Question Mandatory : No Calculator : None Response Time : N.A Think Time : N.A Minimum Instruction Time : 0

Correct Marks : 5 Wrong Marks : 1

Question Key Details :

Key	Value
Comprehension	MCQ

જો આપણે ₹455ના સરવાળા ને 4:3 માં વિભાજીત કરીએ, તો (રૂપિયામાં) મોટો હિસ્સે છે તે

1. 235

2. 260

3. 195

4. 175

Options :

485584146745. 1

485584146746. 2

485584146747. 3

485584146748. 4

Question Number : 52 Question Id : 48558436687 Question Type : MCQ Option Shuffling : No Is Question Mandatory : No Calculator : None Response Time : N.A Think Time : N.A Minimum Instruction Time : 0

Correct Marks : 5 Wrong Marks : 1

Question Key Details :

Key	Value
Comprehension	MCQ

મોત્ત ₹ 455 અನ್ನು 4:3 ર અનુપાતદલ્લિ ભાગ મારુદિદાગ દોઢ્ઢ પાલુ (₹ ગલ્લિ):

1. 235

2. 260

3. 195

4. 175

Options :

485584146745. 1

485584146746. 2

485584146747. 3

485584146748. 4

Question Number : 52 Question Id : 48558436687 Question Type : MCQ Option Shuffling : No Is Question Mandatory : No Calculator : None Response Time : N.A Think Time : N.A Minimum Instruction Time : 0

Correct Marks : 5 Wrong Marks : 1

Question Key Details :

Key	Value
Comprehension	MCQ

₹ 455 നെ 4:3 അനുപാതത്തിൽ വീതം വെച്ചാൽ ഏറ്റവും വലിയ പങ്ക് എത്ര :

1. 235
2. 260
3. 195
4. 175

Options :

485584146745. 1
485584146746. 2
485584146747. 3
485584146748. 4

Question Number : 52 Question Id : 48558436687 Question Type : MCQ Option Shuffling : No Is Question Mandatory : No Calculator : None Response Time : N.A Think Time : N.A Minimum Instruction Time : 0

Correct Marks : 5 Wrong Marks : 1

Question Key Details :

Key	Value
Comprehension	MCQ

4:3 या गुणोत्तरात जर एकूण 455 रुपयांची विभागणी केली तर मोठा हिस्सा (रुपयांमध्ये) किती असेल?

1. 235
2. 260
3. 195
4. 175

Options :

485584146745. 1
485584146746. 2
485584146747. 3
485584146748. 4

Question Number : 52 Question Id : 48558436687 Question Type : MCQ Option Shuffling : No Is Question Mandatory : No Calculator : None Response Time : N.A Think Time : N.A Minimum Instruction Time : 0

Correct Marks : 5 Wrong Marks : 1

Question Key Details :

Key	Value
Comprehension	MCQ

ଆମେ ₹ 455 କୁ 4:3 ଅନୁପାତରେ ବିଭାଜନ କରିବା, ତାହାହେଲେ ବୃହତ୍ତମ ଅଂଶଟି ଟଙ୍କା (₹ ରେ) ଆକାରରେ କେତେ ହେବ?

1. 235
2. 260
3. 195
4. 175

Options :

485584146745. 1
485584146746. 2
485584146747. 3
485584146748. 4

Question Number : 52 Question Id : 48558436687 Question Type : MCQ Option Shuffling : No Is Question Mandatory : No Calculator : None Response Time : N.A Think Time : N.A Minimum Instruction Time : 0

Correct Marks : 5 Wrong Marks : 1

Question Key Details :

Key	Value
Comprehension	MCQ

ਜੇਕਰ ਅਸੀਂ 4:3 ਦੇ ਅਨੁପਾਤ ਵਿੱਚ ₹ 455 ਦੀ ਰਕਮ ਨੂੰ ਵੰਡਦੇ ਹਾਂ ਤਾਂ ਵੱਡਾ ਹਿੱਸਾ (₹) ਹੁੰਦਾ ਹੈ-

1. 235
2. 260
3. 195
4. 175

Options :

485584146745. 1
485584146746. 2
485584146747. 3
485584146748. 4

Question Number : 52 Question Id : 48558436687 Question Type : MCQ Option Shuffling : No Is Question Mandatory : No Calculator : None Response Time : N.A Think Time : N.A Minimum Instruction Time : 0

Correct Marks : 5 Wrong Marks : 1

Question Key Details :

Key	Value
Comprehension	MCQ

நாம் ₹ 455 என்ற ஒரு கூட்டுத்தொகையை 4:3 விகிதத்தில் வகுக்கும்போது, கிடைக்கப்பெறும் மிகப்பெரிய பங்கு (₹ ரூபாயில்) என்பது:

1. 235
2. 260
3. 195
4. 175

Options :

485584146745. 1
485584146746. 2
485584146747. 3
485584146748. 4

Question Number : 52 Question Id : 48558436687 Question Type : MCQ Option Shuffling : No Is Question Mandatory : No Calculator : None Response Time : N.A Think Time : N.A Minimum Instruction Time : 0

Correct Marks : 5 Wrong Marks : 1

Question Key Details :

Key	Value
Comprehension	MCQ

₹ 455 மூலத்தை 4:3 నిష్పత్తిలో విభజిస్తే, పెద్ద వాటా (₹ లో) _____

1. 235
2. 260
3. 195
4. 175

Options :

485584146745. 1
485584146746. 2
485584146747. 3
485584146748. 4

Question Number : 52 Question Id : 48558436687 Question Type : MCQ Option Shuffling : No Is Question Mandatory : No Calculator : None Response Time : N.A Think Time : N.A Minimum Instruction Time : 0

Correct Marks : 5 Wrong Marks : 1

Question Key Details :

Key	Value
Comprehension	MCQ

اگر ہم 455 روپے کی رقم کو 4:3 کے تناسب میں تقسیم کریں، تو بڑا حصہ کتنا ہوگا؟

1. 235
2. 260
3. 195
4. 175

Options :

485584146745. 1
485584146746. 2
485584146747. 3
485584146748. 4

Question Number : 53 Question Id : 48558436688 Question Type : MCQ Option Shuffling : No Is Question Mandatory : No Calculator : None Response Time : N.A Think Time : N.A Minimum Instruction Time : 0

Correct Marks : 5 Wrong Marks : 1

Question Key Details :

Key	Value
Comprehension	MCQ

Aman began a business with ₹45,000 and was joined afterwards by Ashish with ₹30,000. When did Ashish join if the profit at the end of the year was divided in the ratio 2:1?

1. After 2 months
2. After 6 months
3. After 3 months
4. After 9 months

Options :

485584146749. 1
485584146750. 2
485584146751. 3
485584146752. 4

Question Number : 53 Question Id : 48558436688 Question Type : MCQ Option Shuffling : No Is Question Mandatory : No Calculator : None Response Time : N.A Think Time : N.A Minimum Instruction Time : 0

Correct Marks : 5 Wrong Marks : 1

Question Key Details :

Key	Value
Comprehension	MCQ

अमन ने ₹45,000 के साथ एक व्यापार शुरू किया। बाद में ₹30,000 का निवेश करते हुए आशीष भी उसमें सम्मिलित हो गया। यदि वर्ष के अंत में लाभ का बँटवारा 2:1 के अनुपात में हुआ, तो आशीष व्यापार में कब सम्मिलित हुआ?

1. 2 माह बाद
2. 6 माह बाद
3. 3 माह बाद
4. 9 माह बाद

Options :

485584146749. 1
485584146750. 2
485584146751. 3
485584146752. 4

Question Number : 53 Question Id : 48558436688 Question Type : MCQ Option Shuffling : No Is Question Mandatory : No Calculator : None Response Time : N.A Think Time : N.A Minimum Instruction Time : 0

Correct Marks : 5 Wrong Marks : 1

Question Key Details :

Key	Value
Comprehension	MCQ

অমনে ₹45,000 ধনেৰে এটা ব্যৱসায় আৰম্ভ কৰিলে আৰু পিছত তাত আশীষে ₹30,000 ধন দি যোগ দিলে। যদি বছৰৰ শেষত হোৱা মুঠ লাভ 2:1 অনুপাতত ভাগ কৰা হৈছে, তেন্তে আশীষে আৰম্ভণিৰপৰা কিমান পিছত যোগ দিছিল?

1. 2 মাহৰ পিছত
2. 6 মাহৰ পিছত
3. 3 মাহৰ পিছত
4. 9 মাহৰ পিছত

Options :

485584146749. 1
485584146750. 2
485584146751. 3
485584146752. 4

Question Number : 53 Question Id : 48558436688 Question Type : MCQ Option Shuffling : No Is Question Mandatory : No Calculator : None Response Time : N.A Think Time : N.A Minimum Instruction Time : 0

Correct Marks : 5 Wrong Marks : 1

Question Key Details :

Key	Value
Comprehension	MCQ

অমন 45,000 টাকা দিয়ে একটি ব্যবসা শুরু করার পরে আশিস 30,000 টাকা দিয়ে ওই ব্যবসার সঙ্গে যুক্ত হয়। যদি বছরের শেষে দুজনের লাভ্যাংশের অনুপাত 2:1 হয়, তাহলে আশিস কত মাস পরে ওই ব্যবসায় যুক্ত হয়েছিল?

1. 2 মাস পরে
2. 6 মাস পরে
3. 2 মাস পরে
4. 9 মাস পরে

Options :

485584146749. 1
485584146750. 2
485584146751. 3
485584146752. 4

Question Number : 53 Question Id : 48558436688 Question Type : MCQ Option Shuffling : No Is Question Mandatory : No Calculator : None Response Time : N.A Think Time : N.A Minimum Instruction Time : 0

Correct Marks : 5 Wrong Marks : 1

Question Key Details :

Key	Value
Comprehension	MCQ

অমনে ₹45,000 থী ঘঁধী শরু ক্রেব ত্যার ঝাএ আশিষ ₹30,000 বর্ঘ তে ঘঁধী মাঁ জঁডাযী জঁ বর্ষনা অঁতমাঁ নঙ্কনে 2:1 না লাগাডার থী ক্রেবামাঁ আবে তী আশিষ ঘঁধামাঁ ক্যারে জঁডাযী হঁতী ?

1. ঝে মঁহঁনা পঁঠী
2. ঞ মঁহঁনা পঁঠী
3. ত্রা মঁহঁনা পঁঠী
4. নব মঁহঁনা পঁঠী

Options :

485584146749. 1
485584146750. 2
485584146751. 3
485584146752. 4

Question Number : 53 Question Id : 48558436688 Question Type : MCQ Option Shuffling : No Is Question Mandatory : No Calculator : None Response Time : N.A Think Time : N.A Minimum Instruction Time : 0

Correct Marks : 5 Wrong Marks : 1

Question Key Details :

Key	Value
Comprehension	MCQ

अमनने 45,000 रुपयांसहित एका व्यवसायाला सुरुवात केली आणि त्यानंतर 30,000 रुपयांसह तो आशिष सोबत जोडला गेला. जर वर्षाच्या शेवटी येणाऱ्या नफ्याच्या गुणोत्तराची विभागणी 2:1 या प्रमाणात होती, तर आशिष केव्हा सहभागी झाला?

1. 2 महिन्यांनंतर
2. 6 महिन्यांनंतर
3. 3 महिन्यांनंतर
4. 9 महिन्यांनंतर

Options :

485584146749. 1
485584146750. 2
485584146751. 3
485584146752. 4

Question Number : 53 Question Id : 48558436688 Question Type : MCQ Option Shuffling : No Is Question Mandatory : No Calculator : None Response Time : N.A Think Time : N.A Minimum Instruction Time : 0

Correct Marks : 5 Wrong Marks : 1

Question Key Details :

Key	Value
Comprehension	MCQ

अमन रोजीच्या बंधूबरोबर ₹45,000 देऊन आरंभ केला. त्याच्या आशिष बंधूबरोबर ₹30,000 देऊन किहीन घरे घेऊन आला. दोन वर्षांनंतर त्यांच्या नफ्याच्या गुणोत्तराची विभागणी 2:1 अन्वयेत झाली. तेव्हा आशिष बंधूबरोबर केव्हा घेऊन आला?

1. 2 मास घरे
2. 6 मास घरे
3. 3 मास घरे
4. 9 मास घरे

Options :

485584146749. 1
485584146750. 2
485584146751. 3
485584146752. 4

Question Number : 53 Question Id : 48558436688 Question Type : MCQ Option Shuffling : No Is Question Mandatory : No Calculator : None Response Time : N.A Think Time : N.A Minimum Instruction Time : 0

Correct Marks : 5 Wrong Marks : 1

Question Key Details :

Key	Value
-----	-------

ਅਮਨ ਨੇ ₹45,000 ਨਾਲ ਕਾਰੋਬਾਰ ਸ਼ੁਰੂ ਕੀਤਾ ਤੇ ਬਾਦ ਵਿੱਚ ਆਸ਼ੀਸ਼ ₹30,000 ਨਾਲ ਉਸਦੇ ਕਾਰੋਬਾਰ ਵਿੱਚ ਜੁੜ ਗਿਆ। ਸਾਲ ਦੇ ਅੰਤ ਵਿੱਚ ਲਾਭ ਨੂੰ 2:1 ਦੇ ਅਨੁਪਾਤ ਨਾਲ ਵੰਡਿਆ ਗਿਆ ਸੀ ਤਾਂ ਆਸ਼ੀਸ਼ ਕਦੇ ਸ਼ਾਮਲ ਹੋਇਆ ਸੀ?

1. 2 ਮਹੀਨੇ ਬਾਅਦ
2. 6 ਮਹੀਨੇ ਬਾਅਦ
3. 3 ਮਹੀਨੇ ਬਾਅਦ
4. 9 ਮਹੀਨੇ ਬਾਅਦ

Options :

485584146749. 1
485584146750. 2
485584146751. 3
485584146752. 4

Question Number : 53 Question Id : 48558436688 Question Type : MCQ Option Shuffling : No Is Question Mandatory : No Calculator : None Response Time : N.A Think Time : N.A Minimum Instruction Time : 0

Correct Marks : 5 Wrong Marks : 1

Question Key Details :

Key	Value
Comprehension	MCQ

ਅਮਨ ਏਨੱਪਰ ਓਰੁ ਵਠਨੀਕਠਠਠਠ/ਵੀਯਾਪਾਰਠਠਠਠ ₹45,000 ਏਨੱਹ ਮੁਠਲੀਂਡੁਡਨੱ ਠੋਠਾਡਠਂਕੁਕੀਰਾਡਰ, ਪੀਰਕੁ ਅਵਰੁਡਨੱ ਆਘੀਠਠ ਏਨੱਪਵਰ ₹30,000 ਏਨੱਹ ਮੁਠਲੀਂਡੁਡਨੱ ਕੂਡਂਡੁ ਸੇਰੁਕੀਰਾਡਰ. ਆਠਂਡੁ ਓਰੁਠੀਯੀਲੱ ਅਵਰਕਠੁਡਠਠਠਠ ਓਲਾਪਮ 2:1 ਏਨੱਹ ਵੀਕੀਠਠਠਠਠਠ ਪੀਰੀਕਕਪਡੁਕੀਰਠੁ ਏਨੀਲੱ, ਏਪੱਪਾਠੁ ਆਘੀਠਠ ਕੂਡਂਡੁ ਸੇਰਨੱਠਾਡਰ?

1. 2 ਮਾਠਠਠਕਠੁਕੁਕੁਪ ਪੀਰਕੁ
2. 6 ਮਾਠਠਠਕਠੁਕੁਕੁਪ ਪੀਰਕੁ
3. 3 ਮਾਠਠਠਕਠੁਕੁਕੁਪ ਪੀਰਕੁ
4. 9 ਮਾਠਠਠਕਠੁਕੁਕੁਪ ਪੀਰਕੁ

Options :

485584146749. 1
485584146750. 2
485584146751. 3
485584146752. 4

Question Number : 53 Question Id : 48558436688 Question Type : MCQ Option Shuffling : No Is Question Mandatory : No Calculator : None Response Time : N.A Think Time : N.A Minimum Instruction Time : 0

Correct Marks : 5 Wrong Marks : 1

Question Key Details :

Key	Value
Comprehension	MCQ

అమన్ ₹45,000 తో వ్యాపారాన్ని ప్రారంభించాడు మరియు ఆ తర్వాత ఆశిష్ ₹30,000 తో చేరాడు. సంవత్సరం చివరిలో వచ్చే లాభాన్ని 2:1 నిష్పత్తిలో భాగిస్తే ఆశిష్ ఎప్పుడు చేరాడు ?

1. 2 నెలల తర్వాత
2. 6 నెలల తర్వాత
3. 3 నెలల తర్వాత
4. 9 నెలల తర్వాత

Options :

485584146749. 1
485584146750. 2
485584146751. 3
485584146752. 4

Question Number : 53 Question Id : 48558436688 Question Type : MCQ Option Shuffling : No Is Question Mandatory : No Calculator : None Response Time : N.A Think Time : N.A Minimum Instruction Time : 0

Correct Marks : 5 Wrong Marks : 1

Question Key Details :

Key	Value
Comprehension	MCQ

أمن نے 45000 روپیوں کے ساتھ ایک تجارت کی بنیاد رکھی۔ اسکے بعد آشیش نے 30000 روپیوں کے ساتھ اس تجارت میں اپنا حصہ ڈالا۔ اگر سال کے خاتمے پر اس تجارت کا منافع 2:1 کی نسبت سے تقسیم ہوا، تو یہ بتائیے کہ آشیش تجارت کے ساتھ کب جڑا ؟

1. 2 مہینے بعد
2. 6 مہینے بعد
3. 3 مہینے بعد
4. 9 مہینے بعد

Options :

485584146749. 1
485584146750. 2
485584146751. 3
485584146752. 4

Question Number : 54 Question Id : 48558436689 Question Type : MCQ Option Shuffling : No Is Question Mandatory : No Calculator : None Response Time : N.A Think Time : N.A Minimum Instruction Time : 0

Correct Marks : 5 Wrong Marks : 1

Question Key Details :

Key	Value
Comprehension	MCQ

The sum of 5% of 10 and 2% of 2 is :

1. 0.25
2. 0.54
3. 0.504
4. 0.452

Options :

485584146753. 1
485584146754. 2
485584146755. 3
485584146756. 4

Question Number : 54 Question Id : 48558436689 Question Type : MCQ Option Shuffling : No Is Question Mandatory : No Calculator : None Response Time : N.A Think Time : N.A Minimum Instruction Time : 0

Correct Marks : 5 Wrong Marks : 1

Question Key Details :

Key	Value
Comprehension	MCQ

10 के 5% तथा 2 के 2% का योग होगा:

1. 0.25
2. 0.54
3. 0.504
4. 0.452

Options :

485584146753. 1
485584146754. 2
485584146755. 3
485584146756. 4

Question Number : 54 Question Id : 48558436689 Question Type : MCQ Option Shuffling : No Is Question Mandatory : No Calculator : None Response Time : N.A Think Time : N.A Minimum Instruction Time : 0

Correct Marks : 5 Wrong Marks : 1

Question Key Details :

Key	Value
Comprehension	MCQ

10 ব 5% আৰু 2 ব 2% ব যোগফল হ'ব :

1. 0.25

2. 0.54

3. 0.504

4. 0.452

Options :

485584146753. 1

485584146754. 2

485584146755. 3

485584146756. 4

Question Number : 54 Question Id : 48558436689 Question Type : MCQ Option Shuffling : No Is Question Mandatory : No Calculator : None Response Time : N.A Think Time : N.A Minimum Instruction Time : 0

Correct Marks : 5 Wrong Marks : 1

Question Key Details :

Key	Value
Comprehension	MCQ

10 এর 5% এবং 2 এর 2% এর যোগফল কত :

1. 0.25

2. 0.54

3. 0.504

4. 0.452

Options :

485584146753. 1

485584146754. 2

485584146755. 3

485584146756. 4

Question Number : 54 Question Id : 48558436689 Question Type : MCQ Option Shuffling : No Is Question Mandatory : No Calculator : None Response Time : N.A Think Time : N.A Minimum Instruction Time : 0

Correct Marks : 5 Wrong Marks : 1

Question Key Details :

Key	Value
Comprehension	MCQ

10 ના 5% અને 2 ના 2% ની સરવાળો શોધો.

1. 0.25

2. 0.54

3. 0.504

4. 0.452

Options :

485584146753. 1

485584146754. 2

485584146755. 3

485584146756. 4

Question Number : 54 Question Id : 48558436689 Question Type : MCQ Option Shuffling : No Is Question Mandatory : No Calculator : None Response Time : N.A Think Time : N.A Minimum Instruction Time : 0

Correct Marks : 5 Wrong Marks : 1

Question Key Details :

Key	Value
Comprehension	MCQ

10ರ 5% ಮತ್ತು 2ರ 2% ಮೊತ್ತವು:

1. 0.25

2. 0.54

3. 0.504

4. 0.452

Options :

485584146753. 1

485584146754. 2

485584146755. 3

485584146756. 4

Question Number : 54 Question Id : 48558436689 Question Type : MCQ Option Shuffling : No Is Question Mandatory : No Calculator : None Response Time : N.A Think Time : N.A Minimum Instruction Time : 0

Correct Marks : 5 Wrong Marks : 1

Question Key Details :

Key	Value
Comprehension	MCQ

പത്തിന്റെ അഞ്ച് ശതമാനവും രണ്ടിന്റെ രണ്ട് ശതമാനവും കൂട്ടുമ്പോൾ എത്ര ?

1. 0.25
2. 0.54
3. 0.504
4. 0.452

Options :

485584146753. 1
485584146754. 2
485584146755. 3
485584146756. 4

Question Number : 54 Question Id : 48558436689 Question Type : MCQ Option Shuffling : No Is Question Mandatory : No Calculator : None Response Time : N.A Think Time : N.A Minimum Instruction Time : 0

Correct Marks : 5 Wrong Marks : 1

Question Key Details :

Key	Value
Comprehension	MCQ

10 च्या 5% व 2 च्या 2% यांची एकूण बेरीज -

1. 0.25
2. 0.54
3. 0.504
4. 0.452

Options :

485584146753. 1
485584146754. 2
485584146755. 3
485584146756. 4

Question Number : 54 Question Id : 48558436689 Question Type : MCQ Option Shuffling : No Is Question Mandatory : No Calculator : None Response Time : N.A Think Time : N.A Minimum Instruction Time : 0

Correct Marks : 5 Wrong Marks : 1

Question Key Details :

Key	Value
Comprehension	MCQ

10 ର 5% ଏବଂ 2 ର 2% କୁ ଯୋଗ କଲେ କେତେ ହେବ?

1. 0.25

2. 0.54

3. 0.504

4. 0.452

Options :

485584146753. 1

485584146754. 2

485584146755. 3

485584146756. 4

Question Number : 54 Question Id : 48558436689 Question Type : MCQ Option Shuffling : No Is Question Mandatory : No Calculator : None Response Time : N.A Think Time : N.A Minimum Instruction Time : 0

Correct Marks : 5 Wrong Marks : 1

Question Key Details :

Key	Value
Comprehension	MCQ

10 ਦਾ 5% ਅਤੇ 2 ਦਾ 2% ਦਾ ਜੋੜ ਹੈ?

1. 0.25

2. 0.54

3. 0.504

4. 0.452

Options :

485584146753. 1

485584146754. 2

485584146755. 3

485584146756. 4

Question Number : 54 Question Id : 48558436689 Question Type : MCQ Option Shuffling : No Is Question Mandatory : No Calculator : None Response Time : N.A Think Time : N.A Minimum Instruction Time : 0

Correct Marks : 5 Wrong Marks : 1

Question Key Details :

Key	Value
Comprehension	MCQ

10 இல் 5% மற்றும் 2 இல் 2% ஆகியவற்றின் கூட்டுத்தொகை :

1. 0.25

2. 0.54

3. 0.504

4. 0.452

Options :

485584146753. 1

485584146754. 2

485584146755. 3

485584146756. 4

Question Number : 54 Question Id : 48558436689 Question Type : MCQ Option Shuffling : No Is Question Mandatory : No Calculator : None Response Time : N.A Think Time : N.A Minimum Instruction Time : 0

Correct Marks : 5 Wrong Marks : 1

Question Key Details :

Key	Value
Comprehension	MCQ

10 లో 5% మరియు 2 లో 2% ల మొత్తం :

1. 0.25

2. 0.54

3. 0.504

4. 0.452

Options :

485584146753. 1

485584146754. 2

485584146755. 3

485584146756. 4

Question Number : 54 Question Id : 48558436689 Question Type : MCQ Option Shuffling : No Is Question Mandatory : No Calculator : None Response Time : N.A Think Time : N.A Minimum Instruction Time : 0

Correct Marks : 5 Wrong Marks : 1

Question Key Details :

Key	Value
Comprehension	MCQ

10 کے 5% اور 2 کے 2% کی جمع کیا ہوگی :

1. 0.25
2. 0.54
3. 0.504
4. 0.452

Options :

485584146753. 1
485584146754. 2
485584146755. 3
485584146756. 4

Question Number : 55 Question Id : 48558436690 Question Type : MCQ Option Shuffling : No Is Question Mandatory : No Calculator : None Response Time : N.A Think Time : N.A Minimum Instruction Time : 0

Correct Marks : 5 Wrong Marks : 1

Question Key Details :

Key	Value
Comprehension	MCQ

Arpita sold her mobile phone for ₹3000 at a loss of 25%. At what price should she sold it to get a profit of 30% ?

1. ₹3380
2. ₹4750
3. ₹5200
4. ₹6840

Options :

485584146757. 1
485584146758. 2
485584146759. 3
485584146760. 4

Question Number : 55 Question Id : 48558436690 Question Type : MCQ Option Shuffling : No Is Question Mandatory : No Calculator : None Response Time : N.A Think Time : N.A Minimum Instruction Time : 0

Correct Marks : 5 Wrong Marks : 1

Question Key Details :

Key	Value
Comprehension	MCQ

अर्पिता ने अपना मोबाइल फोन 25% की हानि पर ₹3000 में बेचा। 30% लाभ प्राप्त करने के लिए उसे यह फोन किस मूल्य पर बेचना चाहिए था?

1. ₹3380
2. ₹4750
3. ₹5200
4. ₹6840

Options :

485584146757. 1
485584146758. 2
485584146759. 3
485584146760. 4

Question Number : 55 Question Id : 48558436690 Question Type : MCQ Option Shuffling : No Is Question Mandatory : No Calculator : None Response Time : N.A Think Time : N.A Minimum Instruction Time : 0

Correct Marks : 5 Wrong Marks : 1

Question Key Details :

Key	Value
Comprehension	MCQ

অর্পিতাই তাইৰ মোবাইল ফোনটো 25% লোকচান ভৰি ₹3000 ত বিক্ৰী কৰিলে। 30% লাভ পাবলৈ হ'লে তাই মোবাইলটো কি দামত বিক্ৰী কৰিব লাগিব?

1. ₹3380
2. ₹4750
3. ₹5200
4. ₹6840

Options :

485584146757. 1
485584146758. 2
485584146759. 3
485584146760. 4

Question Number : 55 Question Id : 48558436690 Question Type : MCQ Option Shuffling : No Is Question Mandatory : No Calculator : None Response Time : N.A Think Time : N.A Minimum Instruction Time : 0

Correct Marks : 5 Wrong Marks : 1

Question Key Details :

Key	Value
Comprehension	MCQ

અર્પિતા તાર મોબાઈલ 3000 ટાકાચ વિક્રમ કરે 25% ક્ષતિ હય। કત ટાકાચ વિક્રિ કરલે તાર 30% લાભ હત?

1. ₹3380
2. ₹4750
3. ₹5200
4. ₹6840

Options :

485584146757. 1
485584146758. 2
485584146759. 3
485584146760. 4

Question Number : 55 Question Id : 48558436690 Question Type : MCQ Option Shuffling : No Is Question Mandatory : No Calculator : None Response Time : N.A Think Time : N.A Minimum Instruction Time : 0

Correct Marks : 5 Wrong Marks : 1

Question Key Details :

Key	Value
Comprehension	MCQ

અર્પિત એ તેની મોબાઈલ ફોન 25% નુકસાન માં ₹3000 માં વેચ્યો જો તેને 30% નફો મેળવવો હોય તો તેને કેટલી કિંમતમાં ફોન વેચવાનો રહેશે ?

1. ₹3380
2. ₹4750
3. ₹5200
4. ₹6840

Options :

485584146757. 1
485584146758. 2
485584146759. 3
485584146760. 4

Question Number : 55 Question Id : 48558436690 Question Type : MCQ Option Shuffling : No Is Question Mandatory : No Calculator : None Response Time : N.A Think Time : N.A Minimum Instruction Time : 0

Correct Marks : 5 Wrong Marks : 1

Question Key Details :

Key	Value
Comprehension	MCQ

ಅರ್ಪಿತಾ ತನ್ನ ಮೊಬೈಲ್ ಫೋನನ್ನು 25% ನಷ್ಟದಲ್ಲಿ ₹3,000 ಕ್ಕೆ ಮಾರಿದಳು. 30% ಲಾಭ ಪಡೆಯಲು ಅವಳು ಯಾವ ಬೆಲೆಗೆ ಮಾರಬೇಕು?

1. ₹3,380
2. ₹4,750
3. ₹5,200
4. ₹6,840

Options :

485584146757. 1
485584146758. 2
485584146759. 3
485584146760. 4

Question Number : 55 Question Id : 48558436690 Question Type : MCQ Option Shuffling : No Is Question Mandatory : No Calculator : None Response Time : N.A Think Time : N.A Minimum Instruction Time : 0

Correct Marks : 5 Wrong Marks : 1

Question Key Details :

Key	Value
Comprehension	MCQ

അർപിത അവളുടെ മൊബൈൽ‌ഫോൺ ₹3000 രൂപക്ക് 25% നഷ്ടത്തിനു വിറ്റു . 30% ലാഭം കിട്ടണമായിരുന്നെങ്കിൽ, എത്ര രൂപക്ക് വിൽക്കണമായിരുന്നു?

1. ₹3380
2. ₹4750
3. ₹5200
4. ₹6840

Options :

485584146757. 1
485584146758. 2
485584146759. 3
485584146760. 4

Question Number : 55 Question Id : 48558436690 Question Type : MCQ Option Shuffling : No Is Question Mandatory : No Calculator : None Response Time : N.A Think Time : N.A Minimum Instruction Time : 0

Correct Marks : 5 Wrong Marks : 1

Question Key Details :

Key	Value
Comprehension	MCQ

अर्पिताने 25% तोट्याने ₹3000 रुपयांत तिचा मोबाईल फोन विकला. 30% नफा होण्यासाठी तिने किती किंमतीला तो विकायला हवा?

1. ₹3380
2. ₹4750
3. ₹5200
4. ₹6840

Options :

485584146757. 1
485584146758. 2
485584146759. 3
485584146760. 4

Question Number : 55 Question Id : 48558436690 Question Type : MCQ Option Shuffling : No Is Question Mandatory : No Calculator : None Response Time : N.A Think Time : N.A Minimum Instruction Time : 0

Correct Marks : 5 Wrong Marks : 1

Question Key Details :

Key	Value
Comprehension	MCQ

अर्पिता तार मोबाइलनु घोरत कु ₹3000 विक्रि करिबारु 25% षुत हेलु। केतेत दार रे ये यद विक्रि करिथु। तह्युहले तार 30% लार हेलथु?

1. ₹3380
2. ₹4750
3. ₹5200
4. ₹6840

Options :

485584146757. 1
485584146758. 2
485584146759. 3
485584146760. 4

Question Number : 55 Question Id : 48558436690 Question Type : MCQ Option Shuffling : No Is Question Mandatory : No Calculator : None Response Time : N.A Think Time : N.A Minimum Instruction Time : 0

Correct Marks : 5 Wrong Marks : 1

Question Key Details :

Key	Value
Comprehension	MCQ

ਅਰਪਿਤਾ ਨੇ ਆਪਣਾ ਮੋਬਾਇਲ ₹3000 ਵਿੱਚ 25% ਘਾਟੇ 'ਤੇ ਵੇਚ ਦਿੱਤਾ। 30% ਦਾ ਮੁਨਾਫ਼ਾ ਲੈਣ ਲਈ ਉਸਨੂੰ ਕਿਸ ਕੀਮਤ ਤੇ ਇਸਨੂੰ ਵੇਚਣਾ ਚਾਹੀਦਾ ਹੈ?

1. ₹3380
2. ₹4750
3. ₹5200
4. ₹6840

Options :

485584146757. 1
485584146758. 2
485584146759. 3
485584146760. 4

Question Number : 55 Question Id : 48558436690 Question Type : MCQ Option Shuffling : No Is Question Mandatory : No Calculator : None Response Time : N.A Think Time : N.A Minimum Instruction Time : 0

Correct Marks : 5 Wrong Marks : 1

Question Key Details :

Key	Value
Comprehension	MCQ

ਅਰਪਿਤਾ ਜਨਪਵਰ ਤਨਠੁ ਮੋਮਾਏਲ ਏਪਾਏਨੇ 25% ਸਤਵੀਤਮ ਨਠੁਡਤੁਠਿਰੁਕੁ ਰੂਪਾਠੁ(₹) 3000 ਏਨੁਰ ਵੀਲੇਕੁਕੁ ਵੀਰੁਕੀਰਾਰੁ. ਅਵਰ 30% ਸਤਵੀਤਮ ਓਲਾਪਮ ਪੇਰ ਏਨੁਨ ਵੀਲੇਕੁਕੁ ਵੀਰੁਕ ਵੇਠੁਠੁਮ?

1. ₹3380
2. ₹4750
3. ₹5200
4. ₹6840

Options :

485584146757. 1
485584146758. 2
485584146759. 3
485584146760. 4

Question Number : 55 Question Id : 48558436690 Question Type : MCQ Option Shuffling : No Is Question Mandatory : No Calculator : None Response Time : N.A Think Time : N.A Minimum Instruction Time : 0

Correct Marks : 5 Wrong Marks : 1

Question Key Details :

Key	Value
Comprehension	MCQ

అర్పిత తన మొబైల్ ఫోన్‌ను 25% నష్టానికి ₹3000 కి విక్రయించింది. 30% లాభం పొందడానికి ఆమె దానిని ఏ ధరకు అమ్మాలి?

1. ₹3380
2. ₹4750
3. ₹5200
4. ₹6840

Options :

485584146757. 1
485584146758. 2
485584146759. 3
485584146760. 4

Question Number : 55 Question Id : 48558436690 Question Type : MCQ Option Shuffling : No Is Question Mandatory : No Calculator : None Response Time : N.A Think Time : N.A Minimum Instruction Time : 0

Correct Marks : 5 Wrong Marks : 1

Question Key Details :

Key	Value
Comprehension	MCQ

از پیتا نے 25% کے نقصان کے ساتھ اپنا موبائل فون 3000 روپے میں بیچا۔ اسے 30% منافع کمانے کیلئے اس فون کو کتنے روپیوں میں بیچنا ہوگا ؟

1. ₹3380
2. ₹4750
3. ₹5200
4. ₹6840

Options :

485584146757. 1
485584146758. 2
485584146759. 3
485584146760. 4

Question Number : 56 Question Id : 48558436691 Question Type : MCQ Option Shuffling : No Is Question Mandatory : No Calculator : None Response Time : N.A Think Time : N.A Minimum Instruction Time : 0

Correct Marks : 5 Wrong Marks : 1

Question Key Details :

Key	Value
Comprehension	MCQ

A sum of ₹12,000 deposited on compound interest becomes double after 5 years. After 20 years, it will become :

1. ₹96,000
2. ₹1,20,000
3. ₹1,24,000
4. ₹1,92,000

Options :

485584146761. 1
485584146762. 2
485584146763. 3
485584146764. 4

Question Number : 56 Question Id : 48558436691 Question Type : MCQ Option Shuffling : No Is Question Mandatory : No Calculator : None Response Time : N.A Think Time : N.A Minimum Instruction Time : 0

Correct Marks : 5 Wrong Marks : 1

Question Key Details :

Key	Value
Comprehension	MCQ

₹12,000 की राशि चक्रवृद्धि ब्याज पर 5 वर्षों में दुगुनी हो जाती है। 20 वर्षों के बाद यह राशि कितनी हो जाएगी?

1. ₹96,000
2. ₹1,20,000
3. ₹1,24,000
4. ₹1,92,000

Options :

485584146761. 1
485584146762. 2
485584146763. 3
485584146764. 4

Question Number : 56 Question Id : 48558436691 Question Type : MCQ Option Shuffling : No Is Question Mandatory : No Calculator : None Response Time : N.A Think Time : N.A Minimum Instruction Time : 0

Correct Marks : 5 Wrong Marks : 1

Question Key Details :

Key	Value
Comprehension	MCQ

চক্রবৃদ্ধি সুতৰ হিচাপত জমা কৰা ₹12,000 ধনৰাশি 5 বছৰৰ পিছত বৃদ্ধি হৈ দুগুণ হৈছে। 20 বছৰ পিছত ই হ'ব :

1. ₹96,000
2. ₹1,20,000
3. ₹1,24,000
4. ₹1,92,000

Options :

485584146761. 1
485584146762. 2
485584146763. 3
485584146764. 4

Question Number : 56 Question Id : 48558436691 Question Type : MCQ Option Shuffling : No Is Question Mandatory : No Calculator : None Response Time : N.A Think Time : N.A Minimum Instruction Time : 0

Correct Marks : 5 Wrong Marks : 1

Question Key Details :

Key	Value
Comprehension	MCQ

12,000 টাকা জমাৰ উপৰ চক্রবৃদ্ধি সুদ 5 বছৰে দ্বিগুণ হয়ে যায় তাহলে 20 বছৰ পরে এর পরিমাণ কত হবে।

1. ₹96,000
2. ₹1,20,000
3. ₹1,24,000
4. ₹1,92,000

Options :

485584146761. 1
485584146762. 2
485584146763. 3
485584146764. 4

Question Number : 56 Question Id : 48558436691 Question Type : MCQ Option Shuffling : No Is Question Mandatory : No Calculator : None Response Time : N.A Think Time : N.A Minimum Instruction Time : 0

Correct Marks : 5 Wrong Marks : 1

Question Key Details :

Key	Value
Comprehension	MCQ

જો ₹12,000 ને ચક્રવૃદ્ધિ વ્યાજે જમા કરવવામાં આવે તો તે 5 વર્ષ માં બે ગણા થાય છે. તો તે 20 વર્ષ બાદ કેટલા રૂપિયા થશે ?

1. ₹96,000
2. ₹1,20,000
3. ₹1,24,000
4. ₹1,92,000

Options :

485584146761. 1
485584146762. 2
485584146763. 3
485584146764. 4

Question Number : 56 Question Id : 48558436691 Question Type : MCQ Option Shuffling : No Is Question Mandatory : No Calculator : None Response Time : N.A Think Time : N.A Minimum Instruction Time : 0

Correct Marks : 5 Wrong Marks : 1

Question Key Details :

Key	Value
Comprehension	MCQ

₹12,000 એકમ મૂલ્યવસ્તુ ચક્રવૃદ્ધિ બંધીય મેલેલે હાલકે મારીદાગ 5 વર્ષગલ નંતર દ્વિગુણગોંડીતુ. 20 વર્ષગલ નંતર આ મૂલ્યવસ્તુ:

1. ₹96,000
2. ₹1,20,000
3. ₹1,24,000
4. ₹1,92,000

Options :

485584146761. 1
485584146762. 2
485584146763. 3
485584146764. 4

Question Number : 56 Question Id : 48558436691 Question Type : MCQ Option Shuffling : No Is Question Mandatory : No Calculator : None Response Time : N.A Think Time : N.A Minimum Instruction Time : 0

Correct Marks : 5 Wrong Marks : 1

Question Key Details :

Key	Value
Comprehension	MCQ

₹12,000 കൂട്ടുപലിശയിൽ നിക്ഷേപിച്ചാൽ 5 വർഷം കഴിയുമ്പോൾ ഇരട്ടി ആകും. എങ്കിൽ 20 വർഷം കഴിയുമ്പോൾ എത്ര ആവും ?

1. ₹96,000
2. ₹1,20,000
3. ₹1,24,000
4. ₹1,92,000

Options :

485584146761. 1
485584146762. 2
485584146763. 3
485584146764. 4

Question Number : 56 Question Id : 48558436691 Question Type : MCQ Option Shuffling : No Is Question Mandatory : No Calculator : None Response Time : N.A Think Time : N.A Minimum Instruction Time : 0

Correct Marks : 5 Wrong Marks : 1

Question Key Details :

Key	Value
Comprehension	MCQ

चक्रवाढ व्याजाने ठेवलेल्या ₹12,000/ रुपयांच्या ठेवीची एकूण ही 5 वर्षात दुप्पट होते, तर 20 वर्षांनंतर ती किती होईल?

1. ₹96,000
2. ₹1,20,000
3. ₹1,24,000
4. ₹1,92,000

Options :

485584146761. 1
485584146762. 2
485584146763. 3
485584146764. 4

Question Number : 56 Question Id : 48558436691 Question Type : MCQ Option Shuffling : No Is Question Mandatory : No Calculator : None Response Time : N.A Think Time : N.A Minimum Instruction Time : 0

Correct Marks : 5 Wrong Marks : 1

Question Key Details :

Key	Value
Comprehension	MCQ

₹12,000 କୁ ଚକ୍ରବୃତ୍ତି ସୁଧ ହାରରେ ଜମା କଲେ ଏହା 5 ବର୍ଷରେ ଦୁଇଗୁଣ ହୋଇଯାଏ। 20 ବର୍ଷ ପରେ ଏହାର ପରିମାଣ କେତେ ହେବ?

1. ₹96,000
2. ₹1,20,000
3. ₹1,24,000
4. ₹1,92,000

Options :

485584146761. 1
485584146762. 2
485584146763. 3
485584146764. 4

Question Number : 56 Question Id : 48558436691 Question Type : MCQ Option Shuffling : No Is Question Mandatory : No Calculator : None Response Time : N.A Think Time : N.A Minimum Instruction Time : 0

Correct Marks : 5 Wrong Marks : 1

Question Key Details :

Key	Value
Comprehension	MCQ

ਮਿਸ਼ਰਤ ਵਿਆਜ ਤੇ ਜਮਾ ਕੀਤੀ ਗਈ ₹12,000 ਦੀ ਰਕਮ 5 ਸਾਲਾਂ ਬਾਦ ਦੁਗਣੀ ਹੋ ਜਾਂਦੀ ਹੈ । 20 ਸਾਲਾਂ ਬਾਦ ਇਹ ਬਣ ਜਾਵੇਗੀ?

1. ₹96,000
2. ₹1,20,000
3. ₹1,24,000
4. ₹1,92,000

Options :

485584146761. 1
485584146762. 2
485584146763. 3
485584146764. 4

Question Number : 56 Question Id : 48558436691 Question Type : MCQ Option Shuffling : No Is Question Mandatory : No Calculator : None Response Time : N.A Think Time : N.A Minimum Instruction Time : 0

Correct Marks : 5 Wrong Marks : 1

Question Key Details :

Key	Value
Comprehension	MCQ

سود مرکب (compound interest) پر جمع کی ہوئی 12000 روپے کی رقم 5 سالوں کے بعد ڈگنی ہو جاتی ہے۔ 20 سالوں کے بعد یہ کتنی بنے گی ؟

1. ₹96,000
2. ₹1,20,000
3. ₹1,24,000
4. ₹1,92,000

Options :

485584146761. 1
485584146762. 2
485584146763. 3
485584146764. 4

Question Number : 57 Question Id : 48558436692 Question Type : MCQ Option Shuffling : No Is Question Mandatory : No Calculator : None Response Time : N.A Think Time : N.A Minimum Instruction Time : 0

Correct Marks : 5 Wrong Marks : 1

Question Key Details :

Key	Value
Comprehension	MCQ

The lengths of the sides of a triangle are 5 m, 5 m and 8 m. What is the area of the triangle ?

1. 12 m²
2. 15 m²
3. 18 m²
4. 20 m²

Options :

485584146765. 1
485584146766. 2
485584146767. 3
485584146768. 4

Question Number : 57 Question Id : 48558436692 Question Type : MCQ Option Shuffling : No Is Question Mandatory : No Calculator : None Response Time : N.A Think Time : N.A Minimum Instruction Time : 0

Correct Marks : 5 Wrong Marks : 1

Question Key Details :

Key	Value
Comprehension	MCQ

किसी त्रिभुज की भुजाओं की लंबाई क्रमशः 5 m, 5 m तथा 8 m है। इस त्रिभुज का क्षेत्रफल क्या होगा

1. 12 m^2
2. 15 m^2
3. 18 m^2
4. 20 m^2

Options :

485584146765. 1
485584146766. 2
485584146767. 3
485584146768. 4

Question Number : 57 Question Id : 48558436692 Question Type : MCQ Option Shuffling : No Is Question Mandatory : No Calculator : None Response Time : N.A Think Time : N.A Minimum Instruction Time : 0

Correct Marks : 5 Wrong Marks : 1

Question Key Details :

Key	Value
Comprehension	MCQ

এটা ত্রিভুজৰ বাহুৰ দৈৰ্ঘ্য 5 m, 5 m আৰু 8 m হ'লে ত্রিভুজটোৰ ক্ষেত্রফল কি হ'ব?

1. 12 m^2
2. 15 m^2
3. 18 m^2
4. 20 m^2

Options :

485584146765. 1
485584146766. 2
485584146767. 3
485584146768. 4

Question Number : 57 Question Id : 48558436692 Question Type : MCQ Option Shuffling : No Is Question Mandatory : No Calculator : None Response Time : N.A Think Time : N.A Minimum Instruction Time : 0

Correct Marks : 5 Wrong Marks : 1

Question Key Details :

Key	Value
Comprehension	MCQ

ত্রিভুজের বাহুর দৈর্ঘ্য 5 m, 5 m এবং 8 m হলে ত্রিভুজটির ক্ষেত্রফল কত?

1. 12 m^2
2. 15 m^2
3. 18 m^2
4. 20 m^2

Options :

485584146765. 1
485584146766. 2
485584146767. 3
485584146768. 4

Question Number : 57 Question Id : 48558436692 Question Type : MCQ Option Shuffling : No Is Question Mandatory : No Calculator : None Response Time : N.A Think Time : N.A Minimum Instruction Time : 0

Correct Marks : 5 Wrong Marks : 1

Question Key Details :

Key	Value
Comprehension	MCQ

ত্রিকোণী ব্যাপ্তিওনী বঁআঠ 5 m, 5 m অনে 8 m ঐ. তী ত্রিকোণী ক্ষেত্রফল শীঘী ?

1. 12 m^2
2. 15 m^2
3. 18 m^2
4. 20 m^2

Options :

485584146765. 1
485584146766. 2
485584146767. 3
485584146768. 4

Question Number : 57 Question Id : 48558436692 Question Type : MCQ Option Shuffling : No Is Question Mandatory : No Calculator : None Response Time : N.A Think Time : N.A Minimum Instruction Time : 0

Correct Marks : 5 Wrong Marks : 1

Question Key Details :

Key	Value
Comprehension	MCQ

ಒಂದು ತ್ರಿಕೋನದ ಬದಿಗಳ ಉದ್ದವು 5 m, 5 m ಮತ್ತು 8 m ಆಗಿದೆ. ತ್ರಿಕೋನದ ವಿಸ್ತೀರ್ಣವೇನು?

1. 12 m^2
2. 15 m^2
3. 18 m^2
4. 20 m^2

Options :

485584146765. 1
485584146766. 2
485584146767. 3
485584146768. 4

Question Number : 57 Question Id : 48558436692 Question Type : MCQ Option Shuffling : No Is Question Mandatory : No Calculator : None Response Time : N.A Think Time : N.A Minimum Instruction Time : 0

Correct Marks : 5 Wrong Marks : 1

Question Key Details :

Key	Value
Comprehension	MCQ

ഒരു ത്രികോണത്തിന്റെ വശങ്ങളുടെ അളവ് 5m, 5m, 8m ആണ്. എങ്കിൽ അതിന്റെ വിസ്തീർണ്ണം എത്ര ?

1. 12 m^2
2. 15 m^2
3. 18 m^2
4. 20 m^2

Options :

485584146765. 1
485584146766. 2
485584146767. 3
485584146768. 4

Question Number : 57 Question Id : 48558436692 Question Type : MCQ Option Shuffling : No Is Question Mandatory : No Calculator : None Response Time : N.A Think Time : N.A Minimum Instruction Time : 0

Correct Marks : 5 Wrong Marks : 1

Question Key Details :

Key	Value
Comprehension	MCQ

त्रिकोणाच्या बाजूंची लांबी ही अनुक्रमे 5 मी., 5 मी. व 8 मी. आहे. तर त्रिकोणाचे क्षेत्रफळ किती?

1. 12 m²
2. 15 m²
3. 18 m²
4. 20 m²

Options :

485584146765. 1
485584146766. 2
485584146767. 3
485584146768. 4

Question Number : 57 Question Id : 48558436692 Question Type : MCQ Option Shuffling : No Is Question Mandatory : No Calculator : None Response Time : N.A Think Time : N.A Minimum Instruction Time : 0

Correct Marks : 5 Wrong Marks : 1

Question Key Details :

Key	Value
Comprehension	MCQ

ଗୋଟିଏ ତ୍ରିଭୁजର ପାର୍श्वମାନଙ୍କର लम्बा 5 मी, 5 मी व 8 मी। एही त्రిभुजର क्षेत्रफल कितने? (वर्ग मीटर)

1. 12 मी² (वर्ग मीटर)
2. 15 मी² (वर्ग मीटर)
3. 18 मी² (वर्ग मीटर)
4. 20 मी² (वर्ग मीटर)

Options :

485584146765. 1
485584146766. 2
485584146767. 3
485584146768. 4

Question Number : 57 Question Id : 48558436692 Question Type : MCQ Option Shuffling : No Is Question Mandatory : No Calculator : None Response Time : N.A Think Time : N.A Minimum Instruction Time : 0

Correct Marks : 5 Wrong Marks : 1

Question Key Details :

Key	Value
Comprehension	MCQ

ਇੱਕ ਤਿਕੋਨ ਦੇ ਪਾਸਿਆਂ ਦੀ ਲੰਬਾਈ 5 m, 5 m ਅਤੇ 8 m ਹੈ। ਤਿਕੋਨ ਦਾ ਖੇਤਰਫਲ ਕੀ ਹੈ?

1. 12 m^2
2. 15 m^2
3. 18 m^2
4. 20 m^2

Options :

485584146765. 1
485584146766. 2
485584146767. 3
485584146768. 4

Question Number : 57 Question Id : 48558436692 Question Type : MCQ Option Shuffling : No Is Question Mandatory : No Calculator : None Response Time : N.A Think Time : N.A Minimum Instruction Time : 0

Correct Marks : 5 Wrong Marks : 1

Question Key Details :

Key	Value
Comprehension	MCQ

ஒரு முக்கோண பக்கங்களின் நீளங்கள் முறையே 5 m, 5 m மற்றும் 8 m என்க. அந்த முக்கோணத்தின் பரப்பு என்ன ?

1. 12 m^2
2. 15 m^2
3. 18 m^2
4. 20 m^2

Options :

485584146765. 1
485584146766. 2
485584146767. 3
485584146768. 4

Question Number : 57 Question Id : 48558436692 Question Type : MCQ Option Shuffling : No Is Question Mandatory : No Calculator : None Response Time : N.A Think Time : N.A Minimum Instruction Time : 0

Correct Marks : 5 Wrong Marks : 1

Question Key Details :

Key	Value
Comprehension	MCQ

ఒక త్రిభుజం లోని భుజాల పొడవులు 5 m, 5 m మరియు 8 m. త్రిభుజ వైశాల్యం ఎంత ?

1. 12 m^2
2. 15 m^2
3. 18 m^2
4. 20 m^2

Options :

485584146765. 1
485584146766. 2
485584146767. 3
485584146768. 4

Question Number : 57 Question Id : 48558436692 Question Type : MCQ Option Shuffling : No Is Question Mandatory : No Calculator : None Response Time : N.A Think Time : N.A Minimum Instruction Time : 0

Correct Marks : 5 Wrong Marks : 1

Question Key Details :

Key	Value
Comprehension	MCQ

ایک مثلث کے اطراف کی لمبائی 5m، 5m اور 8m ہے، اس کا رقبہ کیا ہوگا ؟

1. 12 m^2
2. 15 m^2
3. 18 m^2
4. 20 m^2

Options :

485584146765. 1
485584146766. 2
485584146767. 3
485584146768. 4

Question Number : 58 Question Id : 48558436693 Question Type : MCQ Option Shuffling : No Is Question Mandatory : No Calculator : None Response Time : N.A Think Time : N.A Minimum Instruction Time : 0

Correct Marks : 5 Wrong Marks : 1

Question Key Details :

Key	Value
Comprehension	MCQ

Find the area (in square units) of a triangle whose vertices are A (2, 4), B (3, 5) and C (-1, 3).

1. 1
2. 2
3. 3
4. 4

Options :

485584146769. 1
485584146770. 2
485584146771. 3
485584146772. 4

Question Number : 58 Question Id : 48558436693 Question Type : MCQ Option Shuffling : No Is Question Mandatory : No Calculator : None Response Time : N.A Think Time : N.A Minimum Instruction Time : 0

Correct Marks : 5 Wrong Marks : 1

Question Key Details :

Key	Value
Comprehension	MCQ

किसी त्रिभुज का क्षेत्रफल (वर्ग इकाई में) ज्ञात करें जिसके शीर्ष क्रमशः A (2, 4), B (3, 5) तथा C (-1, 3) हैं।

1. 1
2. 2
3. 3
4. 4

Options :

485584146769. 1
485584146770. 2
485584146771. 3
485584146772. 4

Question Number : 58 Question Id : 48558436693 Question Type : MCQ Option Shuffling : No Is Question Mandatory : No Calculator : None Response Time : N.A Think Time : N.A Minimum Instruction Time : 0

Correct Marks : 5 Wrong Marks : 1

Question Key Details :

Key	Value
Comprehension	MCQ

A (2, 4), B (3, 5) আৰু C (-1, 3) শীৰ্ষবিন্দুযুক্ত ত্ৰিভুজটোৰ ক্ষেত্ৰফল (বৰ্গ এককত) নিৰ্ণয় কৰা।

1. 1

2. 2

3. 3

4. 4

Options :

485584146769. 1

485584146770. 2

485584146771. 3

485584146772. 4

Question Number : 58 Question Id : 48558436693 Question Type : MCQ Option Shuffling : No Is Question Mandatory : No Calculator : None Response Time : N.A Think Time : N.A Minimum Instruction Time : 0

Correct Marks : 5 Wrong Marks : 1

Question Key Details :

Key	Value
Comprehension	MCQ

একটি ত্ৰিভুজৰ ক্ষেত্ৰ (বৰ্গ এককে) সন্ধান কৰুন যাৰ শীৰ্ষ বিন্দুগুলি A (2, 4), B (3, 5) এবং C (-1, 3)।

1. 1

2. 2

3. 3

4. 4

Options :

485584146769. 1

485584146770. 2

485584146771. 3

485584146772. 4

Question Number : 58 Question Id : 48558436693 Question Type : MCQ Option Shuffling : No Is Question Mandatory : No Calculator : None Response Time : N.A Think Time : N.A Minimum Instruction Time : 0

Correct Marks : 5 Wrong Marks : 1

Question Key Details :

Key	Value
Comprehension	MCQ

ഒരു ത്രികോണത്തിന്റെ ലംബങ്ങൾ A (2, 4), B (3, 5) C (-1, 3) ആണെങ്കിൽ അതിന്റെ വിസ്തീർണ്ണം (sq : units) എത്ര ?

1. 1
2. 2
3. 3
4. 4

Options :

485584146769. 1
485584146770. 2
485584146771. 3
485584146772. 4

Question Number : 58 Question Id : 48558436693 Question Type : MCQ Option Shuffling : No Is Question Mandatory : No Calculator : None Response Time : N.A Think Time : N.A Minimum Instruction Time : 0

Correct Marks : 5 Wrong Marks : 1

Question Key Details :

Key	Value
Comprehension	MCQ

शिरोबिंदू A (2, 4), B (3, 5) आणि C (-1, 3) असणाऱ्या त्रिकोणाचे क्षेत्रफळ (चौरस एककात) शोधा.

1. 1
2. 2
3. 3
4. 4

Options :

485584146769. 1
485584146770. 2
485584146771. 3
485584146772. 4

Question Number : 58 Question Id : 48558436693 Question Type : MCQ Option Shuffling : No Is Question Mandatory : No Calculator : None Response Time : N.A Think Time : N.A Minimum Instruction Time : 0

Correct Marks : 5 Wrong Marks : 1

Question Key Details :

Key	Value
Comprehension	MCQ

ਗੋਰੀ-1 ਤਿਊਕਰ ਯੇਤੁਫਲ (ਕਰੀ-1 ਕਕ ਰੇ) ਨਿਊਕ ਕਰ ਯਾਯਾਰ ਗ1ਬਿਊਫਲ (vertices) ਯੇਯੇ A (2, 4), B (3, 5) ਏ C (-1, 3)।

1. 1

2. 2

3. 3

4. 4

Options :

485584146769. 1

485584146770. 2

485584146771. 3

485584146772. 4

Question Number : 58 Question Id : 48558436693 Question Type : MCQ Option Shuffling : No Is Question Mandatory : No Calculator : None Response Time : N.A Think Time : N.A Minimum Instruction Time : 0

Correct Marks : 5 Wrong Marks : 1

Question Key Details :

Key	Value
Comprehension	MCQ

ਇੱਕ ਤਿਕੋਨ ਦਾ ਖੇਤਰਫਲ (ਵਰਗ ਇਕਾਈਆਂ ਵਿੱਚ) ਲੱਭੋ ਜਿਸਦੇ ਸਿਰਲੇਖ A (2, 4), B (3, 5) ਅਤੇ C (-1, 3) ਹਨ?

1. 1

2. 2

3. 3

4. 4

Options :

485584146769. 1

485584146770. 2

485584146771. 3

485584146772. 4

Question Number : 58 Question Id : 48558436693 Question Type : MCQ Option Shuffling : No Is Question Mandatory : No Calculator : None Response Time : N.A Think Time : N.A Minimum Instruction Time : 0

Correct Marks : 5 Wrong Marks : 1

Question Key Details :

Key	Value
Comprehension	MCQ

A (2, 4), B (3, 5) மற்றும் C (-1, 3) என்ற முனைப்புள்ளிகள் உடைய ஒரு முக்கோணத்தின் பரப்பைக் (சதுர அலகுகளில்) காண்க.

1. 1

2. 2

3. 3

4. 4

Options :

485584146769. 1

485584146770. 2

485584146771. 3

485584146772. 4

Question Number : 58 Question Id : 48558436693 Question Type : MCQ Option Shuffling : No Is Question Mandatory : No Calculator : None Response Time : N.A Think Time : N.A Minimum Instruction Time : 0

Correct Marks : 5 Wrong Marks : 1

Question Key Details :

Key	Value
Comprehension	MCQ

త్రిభుజం యొక్క శీర్షాలు A (2, 4), B (3, 5) మరియు C (-1, 3). త్రిభుజ వైశాల్యం (చదరపు యూనిట్ల లో) కనుక్కోండి

1. 1

2. 2

3. 3

4. 4

Options :

485584146769. 1

485584146770. 2

485584146771. 3

485584146772. 4

Question Number : 58 Question Id : 48558436693 Question Type : MCQ Option Shuffling : No Is Question Mandatory : No Calculator : None Response Time : N.A Think Time : N.A Minimum Instruction Time : 0

Correct Marks : 5 Wrong Marks : 1

Question Key Details :

Key	Value
Comprehension	MCQ

ایک مثلث کا رقبہ نکالیں مربع اکائی میں جسکے راس ہیں : C (-1, 3) اور A (2, 4), B (3, 5)

1. 1

2. 2

3. 3

4. 4

Options :

485584146769. 1

485584146770. 2

485584146771. 3

485584146772. 4

Question Number : 59 Question Id : 48558436694 Question Type : MCQ Option Shuffling : No Is Question Mandatory : No Calculator : None Response Time : N.A Think Time : N.A Minimum Instruction Time : 0

Correct Marks : 5 Wrong Marks : 1

Question Key Details :

Key	Value
Comprehension	MCQ

The mean of first ten prime numbers is :

1. 12

2. 12.9

3. 13

4. 10.1

Options :

485584146773. 1

485584146774. 2

485584146775. 3

485584146776. 4

Question Number : 59 Question Id : 48558436694 Question Type : MCQ Option Shuffling : No Is Question Mandatory : No Calculator : None Response Time : N.A Think Time : N.A Minimum Instruction Time : 0

Correct Marks : 5 Wrong Marks : 1

Question Key Details :

Key	Value
Comprehension	MCQ

प्रथम 10 अभाज्य संख्याओं का माध्य है :

1. 12
2. 12.9
3. 13
4. 10.1

Options :

485584146773. 1
485584146774. 2
485584146775. 3
485584146776. 4

Question Number : 59 Question Id : 48558436694 Question Type : MCQ Option Shuffling : No Is Question Mandatory : No Calculator : None Response Time : N.A Think Time : N.A Minimum Instruction Time : 0

Correct Marks : 5 Wrong Marks : 1

Question Key Details :

Key	Value
Comprehension	MCQ

प्रथम दहटा मूलिक संख्यांर माध्य वा गड़ हैछेः

1. 12
2. 12.9
3. 13
4. 10.1

Options :

485584146773. 1
485584146774. 2
485584146775. 3
485584146776. 4

Question Number : 59 Question Id : 48558436694 Question Type : MCQ Option Shuffling : No Is Question Mandatory : No Calculator : None Response Time : N.A Think Time : N.A Minimum Instruction Time : 0

Correct Marks : 5 Wrong Marks : 1

Question Key Details :

Key	Value
Comprehension	MCQ

প্রথম দশটি মৌলিক সংখ্যার গড় হল :

1. 12

2. 12.9

3. 13

4. 14

Options :

485584146773. 1

485584146774. 2

485584146775. 3

485584146776. 4

Question Number : 59 Question Id : 48558436694 Question Type : MCQ Option Shuffling : No Is Question Mandatory : No Calculator : None Response Time : N.A Think Time : N.A Minimum Instruction Time : 0

Correct Marks : 5 Wrong Marks : 1

Question Key Details :

Key	Value
Comprehension	MCQ

প্রথম দশ অবিভাজ্য সংখ্যাগুলোর সরেবরাহ শীঘ্রো.

1. 12

2. 12.9

3. 13

4. 14

Options :

485584146773. 1

485584146774. 2

485584146775. 3

485584146776. 4

Question Number : 59 Question Id : 48558436694 Question Type : MCQ Option Shuffling : No Is Question Mandatory : No Calculator : None Response Time : N.A Think Time : N.A Minimum Instruction Time : 0

Correct Marks : 5 Wrong Marks : 1

Question Key Details :

Key	Value
Comprehension	MCQ

ಮೊದಲ 10 ಅವಿಭಾಜ್ಯ ಸಂಖ್ಯೆಗಳ ಸರಾಸರಿಯು:

1. 12

2. 12.9

3. 13

4. 14

Options :

485584146773. 1

485584146774. 2

485584146775. 3

485584146776. 4

Question Number : 59 Question Id : 48558436694 Question Type : MCQ Option Shuffling : No Is Question Mandatory : No Calculator : None Response Time : N.A Think Time : N.A Minimum Instruction Time : 0

Correct Marks : 5 Wrong Marks : 1

Question Key Details :

Key	Value
Comprehension	MCQ

ആദ്യ പത്ത് പ്രൈಂ നമ്പರ್‌ಗಳിന്റെ ശരാശರಿ എത്ര ?

1. 12

2. 12.9

3. 13

4. 14

Options :

485584146773. 1

485584146774. 2

485584146775. 3

485584146776. 4

Question Number : 59 Question Id : 48558436694 Question Type : MCQ Option Shuffling : No Is Question Mandatory : No Calculator : None Response Time : N.A Think Time : N.A Minimum Instruction Time : 0

Correct Marks : 5 Wrong Marks : 1

Question Key Details :

Key	Value
Comprehension	MCQ

पहिल्या दहा मूळ संख्यांचा मध्य -

1. 12

2. 12.9

3. 13

4. 14

Options :

485584146773. 1

485584146774. 2

485584146775. 3

485584146776. 4

Question Number : 59 Question Id : 48558436694 Question Type : MCQ Option Shuffling : No Is Question Mandatory : No Calculator : None Response Time : N.A Think Time : N.A Minimum Instruction Time : 0

Correct Marks : 5 Wrong Marks : 1

Question Key Details :

Key	Value
Comprehension	MCQ

ପ୍ରଥମ ଦଶ ଗୋଟିକି ସଂଖ୍ୟାର ମଧ୍ୟ (mean) କେତେ?

1. 12

2. 12.9

3. 13

4. 10.1

Options :

485584146773. 1

485584146774. 2

485584146775. 3

485584146776. 4

Question Number : 59 Question Id : 48558436694 Question Type : MCQ Option Shuffling : No Is Question Mandatory : No Calculator : None Response Time : N.A Think Time : N.A Minimum Instruction Time : 0

Correct Marks : 5 Wrong Marks : 1

Question Key Details :

Key	Value
Comprehension	MCQ

ਪਹਿਲੇ ਦਸ ਪੂਰਨ ਅੰਕਾਂ ਦਾ ਮੱਧਮਾਨ ਕੀ ਹੋਵੇਗਾ ?

1. 12

2. 12.9

3. 13

4. 14

Options :

485584146773. 1

485584146774. 2

485584146775. 3

485584146776. 4

Question Number : 59 Question Id : 48558436694 Question Type : MCQ Option Shuffling : No Is Question Mandatory : No Calculator : None Response Time : N.A Think Time : N.A Minimum Instruction Time : 0

Correct Marks : 5 Wrong Marks : 1

Question Key Details :

Key	Value
Comprehension	MCQ

முதல் பத்து பகா எண்களின் சராசரி என்பது :

1. 12

2. 12.9

3. 13

4. 14

Options :

485584146773. 1

485584146774. 2

485584146775. 3

485584146776. 4

Question Number : 59 Question Id : 48558436694 Question Type : MCQ Option Shuffling : No Is Question Mandatory : No Calculator : None Response Time : N.A Think Time : N.A Minimum Instruction Time : 0

Correct Marks : 5 Wrong Marks : 1

Question Key Details :

Key	Value
Comprehension	MCQ

మొదటి పది ప్రధాన సంఖ్యల సగటు:

1. 12
2. 12.9
3. 13
4. 14

Options :

485584146773. 1
485584146774. 2
485584146775. 3
485584146776. 4

Question Number : 59 Question Id : 48558436694 Question Type : MCQ Option Shuffling : No Is Question Mandatory : No Calculator : None Response Time : N.A Think Time : N.A Minimum Instruction Time : 0

Correct Marks : 5 Wrong Marks : 1

Question Key Details :

Key	Value
Comprehension	MCQ

پہلے 10 عدد منبائن (prime numbers) کی اوسط کیا ہے ؟

1. 12
2. 12.9
3. 13
4. 14

Options :

485584146773. 1
485584146774. 2
485584146775. 3
485584146776. 4

Question Number : 60 Question Id : 48558436695 Question Type : MCQ Option Shuffling : No Is Question Mandatory : No Calculator : None Response Time : N.A Think Time : N.A Minimum Instruction Time : 0

Correct Marks : 5 Wrong Marks : 1

Question Key Details :

Key	Value
Comprehension	MCQ

From a pack of 52 cards one card is drawn at random. What is the probability that the card drawn is a ten or a spade ?

1. $\frac{1}{4}$

2. $\frac{4}{13}$

3. $\frac{1}{13}$

4. $\frac{1}{26}$

Options :

485584146777. 1

485584146778. 2

485584146779. 3

485584146780. 4

Question Number : 60 Question Id : 48558436695 Question Type : MCQ Option Shuffling : No Is Question Mandatory : No Calculator : None Response Time : N.A Think Time : N.A Minimum Instruction Time : 0

Correct Marks : 5 Wrong Marks : 1

Question Key Details :

Key	Value
Comprehension	MCQ

52 पत्तों की गड्डी से एक पत्ता यादृच्छिक निकाला गया। इस पत्ते का 10 या हुकुम का पत्ता होने की प्रायिकता क्या होगी?

1. $\frac{1}{4}$

2. $\frac{4}{13}$

3. $\frac{1}{13}$

4. $\frac{1}{26}$

Options :

485584146777. 1

485584146778. 2

485584146779. 3

485584146780. 4

Question Number : 60 Question Id : 48558436695 Question Type : MCQ Option Shuffling : No Is Question Mandatory : No Calculator : None Response Time : N.A Think Time : N.A Minimum Instruction Time : 0

Correct Marks : 5 Wrong Marks : 1

Question Key Details :

Key	Value
Comprehension	MCQ

52খন তাচপাতযুক্ত পেকেট এটাৰপৰা এখন পাত যাদৃচ্ছিকভাৱে টনা হৈছে। সেই পাতখন এখন 10 নম্বৰযুক্ত পাত বা এখন স্পেডৰ পাত হোৱাৰ সম্ভাৱিতা কিমান?

1. $\frac{1}{4}$

2. $\frac{4}{13}$

3. $\frac{1}{13}$

4. $\frac{1}{26}$

Options :

485584146777. 1

485584146778. 2

485584146779. 3

485584146780. 4

Question Number : 60 Question Id : 48558436695 Question Type : MCQ Option Shuffling : No Is Question Mandatory : No Calculator : None Response Time : N.A Think Time : N.A Minimum Instruction Time : 0

Correct Marks : 5 Wrong Marks : 1

Question Key Details :

Key	Value
Comprehension	MCQ

52 টি কাৰ্ডেৰ একাটি প্যাক থেকে একাটি কাৰ্ড এলোমেলো ভাবে টানা হয়। টানা কাৰ্ডটি দশ অথবা একাটি স্পেড হওয়াৰ সম্ভবনা কত?

1. $\frac{1}{4}$

2. $\frac{4}{13}$

3. $\frac{1}{13}$

4. $\frac{1}{26}$

Options :

485584146777. 1

485584146778. 2

485584146779. 3

485584146780. 4

Options :

- 485584146777. 1
- 485584146778. 2
- 485584146779. 3
- 485584146780. 4

Question Number : 60 Question Id : 48558436695 Question Type : MCQ Option Shuffling : No Is Question Mandatory : No Calculator : None Response Time : N.A Think Time : N.A Minimum Instruction Time : 0

Correct Marks : 5 Wrong Marks : 1

Question Key Details :

Key	Value
Comprehension	MCQ

52 കാർഡുകൾ ഉള്ള ഒരു പാക്കിൽ നിന്നും ഒരു കാർഡ് ക്രമരഹിതമായി എടുത്താൽ, അത് ടെനോ, സ്പേഡോ ആകാനുള്ള സാധ്യത ?

1. $\frac{1}{4}$

2. $\frac{4}{13}$

3. $\frac{1}{13}$

4. $\frac{1}{26}$

Options :

- 485584146777. 1
- 485584146778. 2
- 485584146779. 3
- 485584146780. 4

Question Number : 60 Question Id : 48558436695 Question Type : MCQ Option Shuffling : No Is Question Mandatory : No Calculator : None Response Time : N.A Think Time : N.A Minimum Instruction Time : 0

Correct Marks : 5 Wrong Marks : 1

Question Key Details :

Key	Value
Comprehension	MCQ

52 पत्यांच्या संचातील एक पत्ता यादृच्छिक पद्धतीने टाकला, तर त्या पत्याची दहा (दशशी) किंवा इस्पिक असण्याची संभाव्यता किती?

1. $\frac{1}{4}$

2. $\frac{4}{13}$

3. $\frac{1}{13}$

4. $\frac{1}{26}$

Options :

485584146777. 1

485584146778. 2

485584146779. 3

485584146780. 4

Question Number : 60 Question Id : 48558436695 Question Type : MCQ Option Shuffling : No Is Question Mandatory : No Calculator : None Response Time : N.A Think Time : N.A Minimum Instruction Time : 0

Correct Marks : 5 Wrong Marks : 1

Question Key Details :

Key	Value
Comprehension	MCQ

गोठिंय 52 ठिं तासुं थुंवा घुंयाकेरुं रू गोठिंय तासुं कुं लसुंशुंनं उावरेरुं उंशां गलां। उंशां याळथुंवा तासुं ठिं दशुं (दश) वा कलाघानं हेरुंवारुं सुंभाव्यता केते?

1. $\frac{1}{4}$

2. $\frac{4}{13}$

3. $\frac{1}{13}$

4. $\frac{1}{26}$

Options :

485584146777. 1

485584146778. 2

485584146779. 3

485584146780. 4

Question Number : 60 Question Id : 48558436695 Question Type : MCQ Option Shuffling : No Is Question Mandatory : No Calculator : None Response Time : N.A Think Time : N.A Minimum Instruction Time : 0

Correct Marks : 5 Wrong Marks : 1

Question Key Details :

Key	Value
Comprehension	MCQ

52 ਕਾਰਡਾਂ ਦੇ ਇੱਕ ਪੈਕ ਵਿੱਚ ਇੱਕ ਕਾਰਡ ਬਿਨਾਂ ਸੋਚੇ ਸਮਝੇ ਖਿੱਚਿਆ ਜਾਂਦਾ ਹੈ। ਇਸ ਗੱਲ ਦੀ ਸੰਭਾਵਨਾ ਕੀ ਹੈ ਕਿ ਖਿੱਚਿਆ ਗਿਆ ਕਾਰਡ ਦਸ ਜਾਂ ਕੁਦਾਲ ਹੈ?

1. $\frac{1}{4}$

2. $\frac{4}{13}$

3. $\frac{1}{13}$

4. $\frac{1}{26}$

Options :

485584146777. 1

485584146778. 2

485584146779. 3

485584146780. 4

Question Number : 60 Question Id : 48558436695 Question Type : MCQ Option Shuffling : No Is Question Mandatory : No Calculator : None Response Time : N.A Think Time : N.A Minimum Instruction Time : 0

Correct Marks : 5 Wrong Marks : 1

Question Key Details :

Key	Value
Comprehension	MCQ

52 ਅੱਡੇਕਾਂ/ਕਾਰਡਾਂ ਕੋਲੋਂ ਇੱਕ ਕਾਰਡ ਬਿਨਾਂ ਸੋਚੇ ਸਮਝੇ ਖਿੱਚਿਆ ਜਾਂਦਾ ਹੈ। ਇਸ ਗੱਲ ਦੀ ਸੰਭਾਵਨਾ ਕੀ ਹੈ ਕਿ ਖਿੱਚਿਆ ਗਿਆ ਕਾਰਡ ਦਸ ਜਾਂ ਕੁਦਾਲ ਹੈ?

1. $\frac{1}{4}$

2. $\frac{4}{13}$

3. $\frac{1}{13}$

4. $\frac{1}{26}$

Options :

485584146777. 1
485584146778. 2
485584146779. 3
485584146780. 4

Question Number : 60 Question Id : 48558436695 Question Type : MCQ Option Shuffling : No Is Question Mandatory : No Calculator : None Response Time : N.A Think Time : N.A Minimum Instruction Time : 0

Correct Marks : 5 Wrong Marks : 1

Question Key Details :

Key	Value
Comprehension	MCQ

52 కార్డుల ప్యాక్ నుండి ఒక కార్డు యాదృచ్ఛికంగా తీయబడింది. తీసిన కార్డు పది లేదా స్పెడ్ గా ఉండే సంభావ్యత ఏమిటి ?

1. $\frac{1}{4}$

2. $\frac{4}{13}$

3. $\frac{1}{13}$

4. $\frac{1}{26}$

Options :

485584146777. 1
485584146778. 2
485584146779. 3
485584146780. 4

Question Number : 60 Question Id : 48558436695 Question Type : MCQ Option Shuffling : No Is Question Mandatory : No Calculator : None Response Time : N.A Think Time : N.A Minimum Instruction Time : 0

Correct Marks : 5 Wrong Marks : 1

Question Key Details :

Key	Value
Comprehension	MCQ

52 کارڈوں کے ایک ڈھیر سے ،، ایک کارڈ سے ترتیب نکالا گیا۔ اس کارڈ کا 10 ہونا یا اسپید (spade) ہونے کا کتنا امکان ہے ؟

1. $\frac{1}{4}$

2. $\frac{4}{13}$

3. $\frac{1}{13}$

4. $\frac{1}{26}$

Options :

485584146777. 1

485584146778. 2

485584146779. 3

485584146780. 4

Question Number : 61 Question Id : 48558436696 Question Type : MCQ Option Shuffling : No Is Question Mandatory : No Calculator : None Response Time : N.A Think Time : N.A Minimum Instruction Time : 0

Correct Marks : 5 Wrong Marks : 1

Question Key Details :

Key	Value
Comprehension	MCQ

Raman purchases 2 pens and 3 pencils and pays ₹36 to the shopkeeper. Her friend Siya purchases 3 pens and 2 pencils and pays ₹49. What is the cost of one pen?

1. ₹17

2. ₹15

3. ₹9

4. ₹2

Options :

485584146781. 1

485584146782. 2

485584146783. 3

485584146784. 4

Question Number : 61 Question Id : 48558436696 Question Type : MCQ Option Shuffling : No Is Question Mandatory : No Calculator : None Response Time : N.A Think Time : N.A Minimum Instruction Time : 0

Correct Marks : 5 Wrong Marks : 1

Question Key Details :

Key	Value
Comprehension	MCQ

रमन 2 पैन तथा 3 पेन्सिलें खरीदता है और दुकानदार को ₹36 देता है। उसकी मित्र सिया 3 पैन तथा 2 पेन्सिलें खरीदती है और दुकानदार को ₹49 देती है। एक पैन का मूल्य क्या है?

1. ₹17
2. ₹15
3. ₹9
4. ₹2

Options :

485584146781. 1
485584146782. 2
485584146783. 3
485584146784. 4

Question Number : 61 Question Id : 48558436696 Question Type : MCQ Option Shuffling : No Is Question Mandatory : No Calculator : None Response Time : N.A Think Time : N.A Minimum Instruction Time : 0

Correct Marks : 5 Wrong Marks : 1

Question Key Details :

Key	Value
Comprehension	MCQ

ৰামানে ২টা কলম আৰু ৩ ডাল পেঞ্চিল কিনি দোকানীজনক ₹৩৬ দিলে। তাইৰ বান্ধৱী ছিয়াই ৩টা কলম আৰু ২ ডাল পেঞ্চিল কিনি ₹৪৯ দিলে। এটা কলমৰ দাম কিমান?

1. ₹17
2. ₹15
3. ₹9
4. ₹2

Options :

485584146781. 1
485584146782. 2
485584146783. 3
485584146784. 4

Question Number : 61 Question Id : 48558436696 Question Type : MCQ Option Shuffling : No Is Question Mandatory : No Calculator : None Response Time : N.A Think Time : N.A Minimum Instruction Time : 0

Correct Marks : 5 Wrong Marks : 1

Question Key Details :

Key	Value
Comprehension	MCQ

રામર દોકાનદારેર કાહ્ છેકે 2ટી કલમ ઁવં 3ટી પેનસલ કલલો 36 ટાકાય। તાર વશ્કુ સલયા 3ટી કલમ ઁવં 2ટી પેનસલ કલલો 49 ટાકાય। તહલે ઁકાટી કલમેર દામ કત?

1. ર17
2. ર15
3. ર9
4. ર2

Options :

485584146781. 1
485584146782. 2
485584146783. 3
485584146784. 4

Question Number : 61 Question Id : 48558436696 Question Type : MCQ Option Shuffling : No Is Question Mandatory : No Calculator : None Response Time : N.A Think Time : N.A Minimum Instruction Time : 0

Correct Marks : 5 Wrong Marks : 1

Question Key Details :

Key	Value
Comprehension	MCQ

રમન રૂપલયા 36 દુકાનદારને આપલને 2 પેન ઁને 3 પેનસલ ખરીદે છે. તેનો મલત્ર સલયા ર49 આપલને 3 પેન ઁને 2 પેનસલ ખરીદે છે. ઁક પેન લી કલમત શોધો ?

1. ર17
2. ર15
3. ર9
4. ર2

Options :

485584146781. 1
485584146782. 2
485584146783. 3
485584146784. 4

Question Number : 61 Question Id : 48558436696 Question Type : MCQ Option Shuffling : No Is Question Mandatory : No Calculator : None Response Time : N.A Think Time : N.A Minimum Instruction Time : 0

Correct Marks : 5 Wrong Marks : 1

Question Key Details :

Key	Value
Comprehension	MCQ

ರಾಮನ್ 2 ಪೆನ್‌ಗಳು ಮತ್ತು 3 ಪೆನ್‌ಸಿಲ್‌ಗಳನ್ನು ಕ್ರಯ ಮಾಡಿದಳು ಮತ್ತು ಅಂಗಡಿಯವನಿಗೆ ₹36 ಗಳನ್ನು ನೀಡಿದಳು. ಅವಳ ಸ್ನೇಹಿತ ಸಿಯಾ 3 ಪೆನ್‌ಗಳು ಮತ್ತು 2 ಪೆನ್‌ಸಿಲ್‌ಗಳನ್ನು ₹49 ಕೊಟ್ಟು ಕ್ರಯ ಮಾಡಿದನು. ಒಂದು ಪೆನ್‌ನ ಬೆಲೆಯೇನು?

1. ₹17
2. ₹15
3. ₹9
4. ₹2

Options :

485584146781. 1
485584146782. 2
485584146783. 3
485584146784. 4

Question Number : 61 Question Id : 48558436696 Question Type : MCQ Option Shuffling : No Is Question Mandatory : No Calculator : None Response Time : N.A Think Time : N.A Minimum Instruction Time : 0

Correct Marks : 5 Wrong Marks : 1

Question Key Details :

Key	Value
Comprehension	MCQ

ರಾಮನ್ 2 ಪೆನ್‌ಗಳನ್ನು 3 ಪೆನ್‌ಸಿಲ್‌ಗಳಿಗೆ ₹36 ರೂಪದಲ್ಲಿ ಖರೀದಿಸಿದಳು. ಅದೇ ಅಂಗಡಿಯ ಸ್ನೇಹಿತ ಸಿಯಾ 3 ಪೆನ್‌ಗಳನ್ನು 2 ಪೆನ್‌ಸಿಲ್‌ಗಳಿಗೆ ₹49 ರೂಪದಲ್ಲಿ ಖರೀದಿಸಿದನು. ಒಂದು ಪೆನ್‌ನ ಬೆಲೆಯೇನು?

1. ₹17
2. ₹15
3. ₹9
4. ₹2

Options :

485584146781. 1
485584146782. 2
485584146783. 3
485584146784. 4

Question Number : 61 Question Id : 48558436696 Question Type : MCQ Option Shuffling : No Is Question Mandatory : No Calculator : None Response Time : N.A Think Time : N.A Minimum Instruction Time : 0

Correct Marks : 5 Wrong Marks : 1

Question Key Details :

Key	Value
Comprehension	MCQ

रमणने दुकानदाराकडून 36 रुपयांत 2 पेन व 3 पेन्सिल खरेदी केल्या. तसेच त्याची मैत्रिण सिया ने 49 रुपयात 3 पेन व 2 पेन्सिल खरेदी केल्या. तर एका पेनाची किंमत किती?

1. ₹17
2. ₹15
3. ₹9
4. ₹2

Options :

485584146781. 1
485584146782. 2
485584146783. 3
485584146784. 4

Question Number : 61 Question Id : 48558436696 Question Type : MCQ Option Shuffling : No Is Question Mandatory : No Calculator : None Response Time : N.A Think Time : N.A Minimum Instruction Time : 0

Correct Marks : 5 Wrong Marks : 1

Question Key Details :

Key	Value
Comprehension	MCQ

रमणने दुकानदाराकडून 36 रुपयांत 2 पेन व 3 पेन्सिल खरेदी केल्या. तसेच त्याची मैत्रिण सिया ने 49 रुपयात 3 पेन व 2 पेन्सिल खरेदी केल्या. तर एका पेनाची किंमत किती?

1. ₹17
2. ₹15
3. ₹9
4. ₹2

Options :

485584146781. 1
485584146782. 2
485584146783. 3
485584146784. 4

Question Number : 61 Question Id : 48558436696 Question Type : MCQ Option Shuffling : No Is Question Mandatory : No Calculator : None Response Time : N.A Think Time : N.A Minimum Instruction Time : 0

Correct Marks : 5 Wrong Marks : 1

Question Key Details :

Key	Value
Comprehension	MCQ

ਰਮਣ 2 ਪੈਨ ਤੇ 3 ਪੈਂਸਿਲ ਖਰੀਦਦਾ ਹੈ ਅਤੇ ਦੁਕਾਨਦਾਰ ਨੂੰ ₹36 ਅਦਾ ਕਰਦਾ ਹੈ। ਉਸਦੀ ਸਹੇਲੀ ਸੀਆ 3 ਪੈਨ ਅਤੇ 2 ਪੈਂਸਿਲਾਂ ਖਰੀਦਦੀ ਹੈ ਅਤੇ ₹49 ਅਦਾ ਕਰਦੀ ਹੈ। ਇੱਕ ਪੈਨ ਦੀ ਕੀਮਤ ਕਿੰਨੀ ਹੈ?

1. ₹17
2. ₹15
3. ₹9
4. ₹2

Options :

485584146781. 1
485584146782. 2
485584146783. 3
485584146784. 4

Question Number : 61 Question Id : 48558436696 Question Type : MCQ Option Shuffling : No Is Question Mandatory : No Calculator : None Response Time : N.A Think Time : N.A Minimum Instruction Time : 0

Correct Marks : 5 Wrong Marks : 1

Question Key Details :

Key	Value
Comprehension	MCQ

ਰਾਮਨ ਈਨਪਵਰ 2 ਪੈਨਾਕਕਲ ਮਹੁਰੁਮ 3 ਪੈਨਸਿਲਕਲੈਲ ਈਪਾਯ(₹) 36 ਈਨੁਰੁ ਵਲਲਕਕੁ ਕਲੈਕਕਾਰਰਲਮਲਰੁਨੁ ਵਾਨੁਕੁਕੁਰਾਰ. ਅਵਰਠੁ ਠੋਠਾਠੀ ਠੁਠਾਠੀ 3 ਪੈਨਾਕਕਲ ਮਹੁਰੁਮ 2 ਪੈਨਸਿਲਕਲੈਲ ਈਪਾਯ(₹) 49 ਈਨੁਰੁ ਵਲਲਕਕੁ ਵਾਨੁਕੁਕੁਰਾਰ ਈਨਲ, ਈਰੁ ਪੈਨਾਵਲਨ ਵਲਲ ਈਨਨ?

1. ₹17
2. ₹15
3. ₹9
4. ₹2

Options :

485584146781. 1
485584146782. 2
485584146783. 3
485584146784. 4

Question Number : 61 Question Id : 48558436696 Question Type : MCQ Option Shuffling : No Is Question Mandatory : No Calculator : None Response Time : N.A Think Time : N.A Minimum Instruction Time : 0

Correct Marks : 5 Wrong Marks : 1

Question Key Details :

Key	Value
Comprehension	MCQ

రమన్ దుకాణదారుడికి ₹36 చెల్లించి 2 కలములు మరియు 3 పెన్సిల్లు కొన్నది. ఆమె స్నేహితురాలు పియా 3 పెన్సిల్లు మరియు 2 పెన్సిల్లు ₹49 చెల్లించి కొన్నది. ఒక పెన్సిల్ ధర ఎంత?

1. ₹17
2. ₹15
3. ₹9
4. ₹2

Options :

485584146781. 1
485584146782. 2
485584146783. 3
485584146784. 4

Question Number : 61 Question Id : 48558436696 Question Type : MCQ Option Shuffling : No Is Question Mandatory : No Calculator : None Response Time : N.A Think Time : N.A Minimum Instruction Time : 0

Correct Marks : 5 Wrong Marks : 1

Question Key Details :

Key	Value
Comprehension	MCQ

రమన్ نے 2 قلم اور 3 پینسل خریدے اور دکاندار کو 36 روپے دیے۔ اس کی دوست پیا نے 3 قلم اور 2 پینسل خریدی اور 49 روپے دیئے۔ ایک قلم کی قیمت کیا ہوگی ؟

1. ₹17
2. ₹15
3. ₹9
4. ₹2

Options :

485584146781. 1
485584146782. 2
485584146783. 3
485584146784. 4

Question Number : 62 Question Id : 48558436697 Question Type : MCQ Option Shuffling : No Is Question Mandatory : No Calculator : None Response Time : N.A Think Time : N.A Minimum Instruction Time : 0

Correct Marks : 5 Wrong Marks : 1

Question Key Details :

Key	Value
Comprehension	MCQ

The angle of elevation of the Sun, when the length of the shadow of a tree is $\sqrt{3}$ times the height of the tree, is ;

1. 30°
2. 45°
3. 60°
4. 90°

Options :

485584146785. 1
485584146786. 2
485584146787. 3
485584146788. 4

Question Number : 62 Question Id : 48558436697 Question Type : MCQ Option Shuffling : No Is Question Mandatory : No Calculator : None Response Time : N.A Think Time : N.A Minimum Instruction Time : 0

Correct Marks : 5 Wrong Marks : 1

Question Key Details :

Key	Value
Comprehension	MCQ

जब किसी वृक्ष की छाया की लम्बाई, उस वृक्ष की ऊँचाई की $\sqrt{3}$ गुनी है, तो सूर्य का उन्नयन कोण है :

1. 30°
2. 45°
3. 60°
4. 90°

Options :

485584146785. 1
485584146786. 2
485584146787. 3
485584146788. 4

Question Number : 62 Question Id : 48558436697 Question Type : MCQ Option Shuffling : No Is Question Mandatory : No Calculator : None Response Time : N.A Think Time : N.A Minimum Instruction Time : 0

Correct Marks : 5 Wrong Marks : 1

Question Key Details :

Key	Value
Comprehension	MCQ

এডাল গছৰ ছাঁৰ দৈৰ্ঘ্য যদি গছডালৰ উচ্চতাৰ $\sqrt{3}$ গুণ হয়, তেতিয়া সূৰ্যৰ উত্থান কোণ হ'ব :

1. 30°
2. 45°
3. 60°
4. 90°

Options :

485584146785. 1
485584146786. 2
485584146787. 3
485584146788. 4

Question Number : 62 Question Id : 48558436697 Question Type : MCQ Option Shuffling : No Is Question Mandatory : No Calculator : None Response Time : N.A Think Time : N.A Minimum Instruction Time : 0

Correct Marks : 5 Wrong Marks : 1

Question Key Details :

Key	Value
Comprehension	MCQ

সমষ্টিৰ উচ্চতা কোন, যখন একটি গাছৰ ছায়াৰ দৈৰ্ঘ্য গাছৰ উচ্চতাৰ $\sqrt{3}$ গুণ হয়

1. 30°
2. 45°
3. 60°
4. 90°

Options :

485584146785. 1
485584146786. 2
485584146787. 3
485584146788. 4

Question Number : 62 Question Id : 48558436697 Question Type : MCQ Option Shuffling : No Is Question Mandatory : No Calculator : None Response Time : N.A Think Time : N.A Minimum Instruction Time : 0

Correct Marks : 5 Wrong Marks : 1

Question Key Details :

Key	Value
Comprehension	MCQ

ಸೂರ್ಯನಿ ಉಚ್ಛ್ರಾಂತನ ಕೋನ (angle of elevation) ಶೂನ್ಯ ಜ್ಯಾಠೆ ಂಡನಿ ಛಾಯಾನಿ ಲೆಒಾಠೆ ಂಡನಿ ಉಚ್ಛ್ರಾಂತ ಕರತಾ $\sqrt{3}$ ಗಳಿ ಛಿ.

1. 30°
2. 45°
3. 60°
4. 90°

Options :

485584146785. 1
485584146786. 2
485584146787. 3
485584146788. 4

Question Number : 62 Question Id : 48558436697 Question Type : MCQ Option Shuffling : No Is Question Mandatory : No Calculator : None Response Time : N.A Think Time : N.A Minimum Instruction Time : 0

Correct Marks : 5 Wrong Marks : 1

Question Key Details :

Key	Value
Comprehension	MCQ

ಒಂದು ಮರದ ನೆರಳಿನ ಉದ್ದವು ಮರದ ಎತ್ತರದ $\sqrt{3}$ ದಷ್ಟು ಇದ್ದಾಗ ಸೂರ್ಯನ ಎತ್ತರದ ಕೋನವು:

1. 30°
2. 45°
3. 60°
4. 90°

Options :

485584146785. 1
485584146786. 2
485584146787. 3
485584146788. 4

Question Number : 62 Question Id : 48558436697 Question Type : MCQ Option Shuffling : No Is Question Mandatory : No Calculator : None Response Time : N.A Think Time : N.A Minimum Instruction Time : 0

Correct Marks : 5 Wrong Marks : 1

Question Key Details :

Key	Value
Comprehension	MCQ

ഒരു മരത്തിന്റെ നിഴലിന്റെ നീളം ആ മരത്തിന്റെ ഉയരത്തേക്കാൾ $\sqrt{3}$ തവണ ആണെങ്കിൽ, സൂര്യന്റെ മേൽ കോൺ എത്ര ?

1. 30°
2. 45°
3. 60°
4. 90°

Options :

485584146785. 1
485584146786. 2
485584146787. 3
485584146788. 4

Question Number : 62 Question Id : 48558436697 Question Type : MCQ Option Shuffling : No Is Question Mandatory : No Calculator : None Response Time : N.A Think Time : N.A Minimum Instruction Time : 0

Correct Marks : 5 Wrong Marks : 1

Question Key Details :

Key	Value
Comprehension	MCQ

जेव्हा झाडाच्या सावलीची लांबी ही झाडाच्या उंचीच्या $\sqrt{3}$ पटीत आहे तर सूर्याचा समुद्रसपाटीपासूनचा कोन _____ आहे.

1. 30°
2. 45°
3. 60°
4. 90°

Options :

485584146785. 1
485584146786. 2
485584146787. 3
485584146788. 4

Question Number : 62 Question Id : 48558436697 Question Type : MCQ Option Shuffling : No Is Question Mandatory : No Calculator : None Response Time : N.A Think Time : N.A Minimum Instruction Time : 0

Correct Marks : 5 Wrong Marks : 1

Question Key Details :

Key	Value
Comprehension	MCQ

ଯେତେବେଳେ ଗୋଟିଏ ବୃକ୍ଷର ଛାଇ ର ଲମ୍ବ, ବୃକ୍ଷର ଉଚ୍ଚତାର $\sqrt{3}$ ଗୁଣ ହୁଏ, ସେତେବେଳେ ସୂର୍ଯ୍ୟର ଉତ୍ତୋଳନ କୋଣ (angle of elevation) କେତେ ହେବ?

1. 30°
2. 45°
3. 60°
4. 90°

Options :

485584146785. 1
485584146786. 2
485584146787. 3
485584146788. 4

Question Number : 62 Question Id : 48558436697 Question Type : MCQ Option Shuffling : No Is Question Mandatory : No Calculator : None Response Time : N.A Think Time : N.A Minimum Instruction Time : 0

Correct Marks : 5 Wrong Marks : 1

Question Key Details :

Key	Value
Comprehension	MCQ

ਸੁਰਜ ਦੀ ਉਚਾਈ ਦਾ ਕੋਣ ਜਦੋਂ ਦਰਖਤ ਦੇ ਪਰਛਾਵੇ ਦੀ ਲੰਬਾਈ ਰੁੱਖ ਦੀ ਉਚਾਈ ਦਾ $\sqrt{3}$ ਗੁਣਾਂ ਹੁੰਦੀ ਹੈ ਤਾਂ ਰੁੱਖ ਦੀ ਉਚਾਈ ਹੈ?

1. 30°
2. 45°
3. 60°
4. 90°

Options :

485584146785. 1
485584146786. 2
485584146787. 3
485584146788. 4

Question Number : 62 Question Id : 48558436697 Question Type : MCQ Option Shuffling : No Is Question Mandatory : No Calculator : None Response Time : N.A Think Time : N.A Minimum Instruction Time : 0

Correct Marks : 5 Wrong Marks : 1

Question Key Details :

Key	Value
Comprehension	MCQ

ஒரு மரத்திலிருந்து விழும் நிழலின் நீளம் என்பது அந்த மரத்தின் உயரத்திற்கு $\sqrt{3}$ மடங்கு உள்ளது எனில், சூரியனின் ஏற்றக்கோணம் என்ன?

1. 30°
2. 45°
3. 60°
4. 90°

Options :

485584146785. 1
485584146786. 2
485584146787. 3
485584146788. 4

Question Number : 62 Question Id : 48558436697 Question Type : MCQ Option Shuffling : No Is Question Mandatory : No Calculator : None Response Time : N.A Think Time : N.A Minimum Instruction Time : 0

Correct Marks : 5 Wrong Marks : 1

Question Key Details :

Key	Value
Comprehension	MCQ

చెట్టు నీడ పొడవు చెట్టు ఎత్తు కి $\sqrt{3}$ రెట్లు ఉన్నప్పుడు సూర్యుని ఊర్ధ్వ కోణం :

1. 30°
2. 45°
3. 60°
4. 90°

Options :

485584146785. 1
485584146786. 2
485584146787. 3
485584146788. 4

Question Number : 62 Question Id : 48558436697 Question Type : MCQ Option Shuffling : No Is Question Mandatory : No Calculator : None Response Time : N.A Think Time : N.A Minimum Instruction Time : 0

Correct Marks : 5 Wrong Marks : 1

Question Key Details :

Key	Value
Comprehension	MCQ

جب ایک بیڑ کے سائے کی لمبائی اس کی اونچائی کا $\sqrt{3}$ حصہ ہے۔ اس وقت سورج کا زاویہ ارتقاع کیا ہوگا ؟

1. 30°
2. 45°
3. 60°
4. 90°

Options :

485584146785. 1
485584146786. 2
485584146787. 3
485584146788. 4

Question Number : 63 Question Id : 48558436698 Question Type : MCQ Option Shuffling : No Is Question Mandatory : No Calculator : None Response Time : N.A Think Time : N.A Minimum Instruction Time : 0

Correct Marks : 5 Wrong Marks : 1

Question Key Details :

Key	Value
Comprehension	MCQ

If the longest diagonal of a cube is $6\sqrt{3}$ cm, then its volume and surface area are _____ and _____ respectively.

1. 216 cm^3 and 210 cm^2
2. 216 cm^3 and 216 cm^2
3. 216 cm^3 and 226 cm^2
4. 226 cm^3 and 226 cm^2

Options :

485584146789. 1
485584146790. 2
485584146791. 3
485584146792. 4

Question Number : 63 Question Id : 48558436698 Question Type : MCQ Option Shuffling : No Is Question Mandatory : No Calculator : None Response Time : N.A Think Time : N.A Minimum Instruction Time : 0

Correct Marks : 5 Wrong Marks : 1

Question Key Details :

Key	Value
Comprehension	MCQ

यदि किसी घन का सबसे लंबा विकर्ण $6\sqrt{3}$ cm हो, तो इसका आयतन तथा पृष्ठ-क्षेत्रफल क्रमशः _____ तथा _____ होंगे।

1. 216 cm^3 तथा 210 cm^2
2. 216 cm^3 तथा 216 cm^2
3. 216 cm^3 तथा 226 cm^2
4. 226 cm^3 तथा 226 cm^2

Options :

485584146789. 1
485584146790. 2
485584146791. 3
485584146792. 4

Question Number : 63 Question Id : 48558436698 Question Type : MCQ Option Shuffling : No Is Question Mandatory : No Calculator : None Response Time : N.A Think Time : N.A Minimum Instruction Time : 0

Correct Marks : 5 Wrong Marks : 1

Question Key Details :

Key	Value
Comprehension	MCQ

এটা ঘনকৰ দীৰ্ঘতম কৰ্ণৰ জোখ $6\sqrt{3}$ cm হ'লে তাৰ আয়তন আৰু পৃষ্ঠকালি হ'ব ক্ৰমান্বয়ে _____ আৰু _____।

1. 216 cm^3 আৰু 210 cm^2
2. 216 cm^3 আৰু 216 cm^2
3. 216 cm^3 আৰু 226 cm^2
4. 226 cm^3 আৰু 226 cm^2

Options :

485584146789. 1
485584146790. 2
485584146791. 3
485584146792. 4

Question Number : 63 Question Id : 48558436698 Question Type : MCQ Option Shuffling : No Is Question Mandatory : No Calculator : None Response Time : N.A Think Time : N.A Minimum Instruction Time : 0

Correct Marks : 5 Wrong Marks : 1

Question Key Details :

Key	Value
Comprehension	MCQ

যদি একটা ঘনকের দীর্ঘতম কর্ণ $6\sqrt{3}$ সেমি হয়। তাহলে এর মান পৃষ্ঠের ক্ষেত্রফল যথাক্রমে _____ এবং _____ হবে।

1. 216 cm^3 এবং 210 cm^2
2. 216 cm^3 এবং 216 cm^2
3. 216 cm^3 এবং 226 cm^2
4. 226 cm^3 এবং 226 cm^2

Options :

485584146789. 1
485584146790. 2
485584146791. 3
485584146792. 4

Question Number : 63 Question Id : 48558436698 Question Type : MCQ Option Shuffling : No Is Question Mandatory : No Calculator : None Response Time : N.A Think Time : N.A Minimum Instruction Time : 0

Correct Marks : 5 Wrong Marks : 1

Question Key Details :

Key	Value
Comprehension	MCQ

જો ક્યુબનો (ઘનનો) સૌથી લાંબો વિકર્ણ $6\sqrt{3} \text{ cm}$ છે, તો તેનું કદ અને સપાટીનું ક્ષેત્રફળ અનુક્રમે _____ અને _____ છે.

1. 216 cm^3 અને 210 cm^2
2. 216 cm^3 અને 216 cm^2
3. 216 cm^3 અને 226 cm^2
4. 226 cm^3 અને 226 cm^2

Options :

485584146789. 1
485584146790. 2
485584146791. 3
485584146792. 4

Question Number : 63 Question Id : 48558436698 Question Type : MCQ Option Shuffling : No Is Question Mandatory : No Calculator : None Response Time : N.A Think Time : N.A Minimum Instruction Time : 0

Correct Marks : 5 Wrong Marks : 1

Question Key Details :

Key	Value
Comprehension	MCQ

ಒಂದು ಘನದ ಅತ್ಯಂತ ಉದ್ದ ಕರ್ಣವು $6\sqrt{3}$ ಸೆ.ಮೀ. ಆಗಿದ್ದರೆ, ಆಗ ಅದರ ಗಾತ್ರ ಮತ್ತು ಮೇಲ್ಮೈ ವಿಸ್ತೀರ್ಣವು ಅನುಕ್ರಮವಾಗಿ _____ ಮತ್ತು _____ .

1. 216 ಘ.ಸೆ.ಮೀ. ಮತ್ತು 210 ಚ.ಸೆ.ಮೀ.
2. 216 ಘ.ಸೆ.ಮೀ. ಮತ್ತು 216 ಚ.ಸೆ.ಮೀ.
3. 216 ಘ.ಸೆ.ಮೀ. ಮತ್ತು 26 ಚ.ಸೆ.ಮೀ.
4. 226 ಘ.ಸೆ.ಮೀ. ಮತ್ತು 226 ಚ.ಸೆ.ಮೀ.

Options :

485584146789. 1
485584146790. 2
485584146791. 3
485584146792. 4

Question Number : 63 Question Id : 48558436698 Question Type : MCQ Option Shuffling : No Is Question Mandatory : No Calculator : None Response Time : N.A Think Time : N.A Minimum Instruction Time : 0

Correct Marks : 5 Wrong Marks : 1

Question Key Details :

Key	Value
Comprehension	MCQ

ಓರು ಕ್ಯೂಬಿನ್ ಗೆ ಛದ್ರವುಂ ನೆೀಒಂ ಕುತೀಯ ಡಯಗನಣಠೆ $6\sqrt{3}$ cm ಠ್ರಣಣಣಕೀಠೆ, ಠಠೀಠೆಠೆ ವ್ಯೂಘವುಂ ಁಪಠೀಠಲ ವೀಠ್ಠೀಠಣವುಂ _____ & _____ ಠ್ರಣ್ ?

1. 216 cm^3 & 210 cm^2
2. 216 cm^3 & 216 cm^2
3. 216 cm^3 & 226 cm^2
4. 226 cm^3 & 226 cm^2

Options :

485584146789. 1
485584146790. 2
485584146791. 3
485584146792. 4

Question Number : 63 Question Id : 48558436698 Question Type : MCQ Option Shuffling : No Is Question Mandatory : No Calculator : None Response Time : N.A Think Time : N.A Minimum Instruction Time : 0

Correct Marks : 5 Wrong Marks : 1

Question Key Details :

Key	Value
Comprehension	MCQ

जर घनाचा सर्वात लांब कर्ण हा $6\sqrt{3}$ सेमी आहे, तर त्याचे घनफळ आणि पृष्ठफळ हे अनुक्रमे _____ आणि _____ आहेत.

1. 216 सेमी³ आणि 210 सेमी²
2. 216 सेमी³ आणि 216 सेमी²
3. 216 सेमी³ आणि 226 सेमी²
4. 226 सेमी³ आणि 226 सेमी²

Options :

485584146789. 1
485584146790. 2
485584146791. 3
485584146792. 4

Question Number : 63 Question Id : 48558436698 Question Type : MCQ Option Shuffling : No Is Question Mandatory : No Calculator : None Response Time : N.A Think Time : N.A Minimum Instruction Time : 0

Correct Marks : 5 Wrong Marks : 1

Question Key Details :

Key	Value
Comprehension	MCQ

ଯଦି ଗୋଟିଏ ଘନକ୍ଷେତ୍ର ର କର୍ଣ୍ଣ (diagonal) $6\sqrt{3}$ ସେମି, ତାହାହେଲେ ତାର ଘନଫଳ (volume) ଏବଂ ପୃଷ୍ଠ କ୍ଷେତ୍ର (surface area) କ୍ରମଶଃ _____ ଏବଂ _____ ହେବ।

1. 216 ସେମି³ ଏବଂ 210 ସେମି²
2. 216 ସେମି³ ଏବଂ 216 ସେମି²
3. 216 ସେମି³ ଏବଂ 226 ସେମି²
4. 226 ସେମି³ ଏବଂ 226 ସେମି²

Options :

485584146789. 1
485584146790. 2
485584146791. 3
485584146792. 4

Question Number : 63 Question Id : 48558436698 Question Type : MCQ Option Shuffling : No Is Question Mandatory : No Calculator : None Response Time : N.A Think Time : N.A Minimum Instruction Time : 0

Correct Marks : 5 Wrong Marks : 1

Question Key Details :

Key	Value
Comprehension	MCQ

ਜੇਕਰ ਇੱਕ ਘੰਟੇ ਦਾ ਸਭ ਤੋਂ ਲੰਬਾ ਵਿਕਰਣ $6\sqrt{3}$ cm ਹੈ ਤਾਂ ਇਸਦਾ ਆਇਤਨ ਅਤੇ ਸਤਹ ਖੇਤਰਫਲ ਕ੍ਰਮਵਾਰ _____ ਅਤੇ _____ ਹੈ।

1. 216 cm^3 ਅਤੇ 210 cm^2
2. 216 cm^3 ਅਤੇ 216 cm^2
3. 216 cm^3 ਅਤੇ 226 cm^2
4. 226 cm^3 ਅਤੇ 226 cm^2

Options :

485584146789. 1
485584146790. 2
485584146791. 3
485584146792. 4

Question Number : 63 Question Id : 48558436698 Question Type : MCQ Option Shuffling : No Is Question Mandatory : No Calculator : None Response Time : N.A Think Time : N.A Minimum Instruction Time : 0

Correct Marks : 5 Wrong Marks : 1

Question Key Details :

Key	Value
Comprehension	MCQ

ஒரு கனசதுரத்தின் நீளமான மூலைவிட்டம் $6\sqrt{3}$ cm எனில், அதன் கன அளவு மற்றும் மேற்பரப்பு முறையே _____ மற்றும் _____ ஆகும்.

1. 216 cm^3 மற்றும் 210 cm^2
2. 216 cm^3 மற்றும் 216 cm^2
3. 216 cm^3 மற்றும் 226 cm^2
4. 226 cm^3 மற்றும் 226 cm^2

Options :

485584146789. 1
485584146790. 2
485584146791. 3
485584146792. 4

Question Number : 63 Question Id : 48558436698 Question Type : MCQ Option Shuffling : No Is Question Mandatory : No Calculator : None Response Time : N.A Think Time : N.A Minimum Instruction Time : 0

Correct Marks : 5 Wrong Marks : 1

Question Key Details :

Key	Value
Comprehension	MCQ

ఘనం యొక్క పొడవైన వికర్ణం $6\sqrt{3}$ cm అయితే, దాని ఘనపరిమాణం మరియు ఉపరితల వైశాల్యం వరుసగా _____ మరియు _____.

1. 216 cm^3 మరియు 210 cm^2
2. 216 cm^3 మరియు 216 cm^2
3. 216 cm^3 మరియు 226 cm^2
4. 226 cm^3 మరియు 226 cm^2

Options :

485584146789. 1
485584146790. 2
485584146791. 3
485584146792. 4

Question Number : 63 Question Id : 48558436698 Question Type : MCQ Option Shuffling : No Is Question Mandatory : No Calculator : None Response Time : N.A Think Time : N.A Minimum Instruction Time : 0

Correct Marks : 5 Wrong Marks : 1

Question Key Details :

Key	Value
Comprehension	MCQ

اگر ایک مکعب کا سب سے لمبا قطر $6\sqrt{3}$ cm ہے، پھر اس کی وولیم (volume) اور سرفیس رقبہ (surface area) حسب ترتیب کیا ہونگے؟

1. 216 cm^3 and 210 cm^2
2. 216 cm^3 and 216 cm^2
3. 216 cm^3 and 226 cm^2
4. 226 cm^3 and 226 cm^2

Options :

485584146789. 1
485584146790. 2
485584146791. 3
485584146792. 4

Question Number : 64 Question Id : 48558436699 Question Type : MCQ Option Shuffling : No Is Question Mandatory : No Calculator : None Response Time : N.A Think Time : N.A Minimum Instruction Time : 0

Correct Marks : 5 Wrong Marks : 1

Question Key Details :

Key	Value
Comprehension	MCQ

A cylindrical vessel open at the top has diameter 28 cm and height 10 cm. The cost of tin-plating it on inside at the rate of ₹50 per 100 cm², is:

(Use, $\pi = \frac{22}{7}$)

1. ₹748
2. ₹813
3. ₹695
4. ₹705

Options :

485584146793. 1
485584146794. 2
485584146795. 3
485584146796. 4

Question Number : 64 Question Id : 48558436699 Question Type : MCQ Option Shuffling : No Is Question Mandatory : No Calculator : None Response Time : N.A Think Time : N.A Minimum Instruction Time : 0

Correct Marks : 5 Wrong Marks : 1

Question Key Details :

Key	Value
Comprehension	MCQ

ऊपर से खुले एक बेलनाकार बर्तन का व्यास 28 cm है तथा ऊँचाई 10 cm है। अंदर की तरफ इसकी टिन प्लेटिंग करने का खर्च ₹50/100 cm² की दर से क्या होगा?

(यदि $\pi = \frac{22}{7}$)

1. ₹748
2. ₹813
3. ₹695
4. ₹705

Options :

485584146793. 1
485584146794. 2
485584146795. 3
485584146796. 4

Question Number : 64 Question Id : 48558436699 Question Type : MCQ Option Shuffling : No Is Question Mandatory : No Calculator : None Response Time : N.A Think Time : N.A Minimum Instruction Time : 0

Correct Marks : 5 Wrong Marks : 1

Question Key Details :

Key	Value
Comprehension	MCQ

ওপৰফালে খোলা এটা চুঙা আকৃতিৰ পাত্ৰৰ ব্যাস হৈছে 28 cm আৰু উচ্চতা 10 cm. প্ৰতি 100 cm² ত ₹50
দৰত তাৰ ভিতৰত টিনপ্লেটিং কৰাৰ খৰচ হ'ব: ($\pi = \frac{22}{7}$ ধৰিবা)

1. ₹748
2. ₹813
3. ₹695
4. ₹705

Options :

485584146793. 1
485584146794. 2
485584146795. 3
485584146796. 4

**Question Number : 64 Question Id : 48558436699 Question Type : MCQ Option Shuffling : No Is Question Mandatory :
No Calculator : None Response Time : N.A Think Time : N.A Minimum Instruction Time : 0**

Correct Marks : 5 Wrong Marks : 1

Question Key Details :

Key	Value
Comprehension	MCQ

উপৰেৰে দিকে খোলা এটা নলাকাৰ পাত্ৰটিৰ ব্যাস 28 cm এবং উচ্চতা 10 সেমি। প্ৰতি 100 cm² তে খৰচ 50
টাকা হাৰে ভিতৰে টিনেৰ প্ৰলেপ দিতে খৰচ হ'বে

(ব্যৱহাৰ কৰ $\pi = \frac{22}{7}$)

1. ₹748
2. ₹813
3. ₹695
4. ₹705

Options :

485584146793. 1
485584146794. 2
485584146795. 3
485584146796. 4

**Question Number : 64 Question Id : 48558436699 Question Type : MCQ Option Shuffling : No Is Question Mandatory :
No Calculator : None Response Time : N.A Think Time : N.A Minimum Instruction Time : 0**

Correct Marks : 5 Wrong Marks : 1

Question Key Details :

Key	Value
Comprehension	MCQ

ટોચ પર ખુલ્લું નાળાકાર પાત્ર જે 28 cm વ્યાસ અને 10 cm ઊંચાઈ ધરાવે છે. ₹50 રૂપિયા પ્રતિ 100 cm² ના કિંમત પર તેની અંદર ની બાજુ એ ટીન-આવરણ (tin-plating) ની કિંમત શોધો.

$$\left(\pi = \frac{22}{7}\right)$$

1. ₹748
2. ₹813
3. ₹695
4. ₹705

Options :

485584146793. 1
485584146794. 2
485584146795. 3
485584146796. 4

Question Number : 64 Question Id : 48558436699 Question Type : MCQ Option Shuffling : No Is Question Mandatory : No Calculator : None Response Time : N.A Think Time : N.A Minimum Instruction Time : 0

Correct Marks : 5 Wrong Marks : 1

Question Key Details :

Key	Value
Comprehension	MCQ

ઢંદુ તરીદ કોલવેયાકારદ તુદિ વ્યાસ 28 cm મત્તુ ઁત્તર 10 cm. ઢલ્લગઢે કલાયી કાકીસલુ (tin-plating) પ્રતી 100 ચ.સં.મી.કે ₹50 રંતે તગલુવ વેચ્ઢવુ:

$$\left(\pi = \frac{22}{7} \text{ અન્નુ બલ્લસી}\right)$$

1. ₹748
2. ₹813
3. ₹695
4. ₹705

Options :

485584146793. 1
485584146794. 2
485584146795. 3
485584146796. 4

Question Number : 64 Question Id : 48558436699 Question Type : MCQ Option Shuffling : No Is Question Mandatory : No Calculator : None Response Time : N.A Think Time : N.A Minimum Instruction Time : 0

Correct Marks : 5 Wrong Marks : 1

Question Key Details :

Key	Value
Comprehension	MCQ

മുകളിൽ തുറക്കുന്ന സിലിണ്ടറിൽ പാത്രത്തിന്റെ വ്യാസം 28 ഉം ഉയരം 10 ഉം ആണെങ്കിൽ, അതിന്റെ ഉൾഭാഗം ടിൻ പൂശാനായി 100 cm² ₹50 രൂപ വച്ച് എത്ര രൂപയാകും ?

$$\left(\pi = \frac{22}{7}\right)$$

1. ₹748
2. ₹813
3. ₹695
4. ₹705

Options :

485584146793. 1
485584146794. 2
485584146795. 3
485584146796. 4

Question Number : 64 Question Id : 48558436699 Question Type : MCQ Option Shuffling : No Is Question Mandatory : No Calculator : None Response Time : N.A Think Time : N.A Minimum Instruction Time : 0

Correct Marks : 5 Wrong Marks : 1

Question Key Details :

Key	Value
Comprehension	MCQ

वरच्या बाजूला उघड्या असलेल्या दंडगोलाकार पात्राचा व्यास 28 सेमी व उंची 10 सेमी आहे. या भांड्याला आतील बाजूने पत्र्याचे आवरण 50 रुपये प्रति 100 सेमी² या दराने केल्यास येणारा खर्च -

$$\left(\pi = \frac{22}{7} \text{ घ्या.}\right)$$

1. ₹748
2. ₹813
3. ₹695
4. ₹705

Options :

485584146793. 1
485584146794. 2
485584146795. 3
485584146796. 4

Question Number : 64 Question Id : 48558436699 Question Type : MCQ Option Shuffling : No Is Question Mandatory : No Calculator : None Response Time : N.A Think Time : N.A Minimum Instruction Time : 0

Correct Marks : 5 Wrong Marks : 1

Question Key Details :

Key	Value
-----	-------

ଗୋଟିଏ ସମକୋଣ ପାତ୍ର (cylindrical vessel) ଯାହାର ଉର୍ଦ୍ଧ୍ୱଭାଗ ଖୋଲା ଅଛି ଓ ଯାହାର ବ୍ୟାସ 28 ସେମି ଏବଂ ଉଚ୍ଚତା 10 ସେମି, ତାର ଭିତର ପାର୍ଶ୍ୱକୁ ଚିଣିଲେପ ଦେବା ପାଇଁ, ପ୍ରତି 100 ସେମି², ରେ ₹50/- ଖର୍ଚ୍ଚ ହୁଏ, କେତେ ଖର୍ଚ୍ଚ ହେବ?

$$\left(\pi = \frac{22}{7} \text{ ବ୍ୟବହାର କର}\right)$$

1. ₹748
2. ₹813
3. ₹695
4. ₹705

Options :

485584146793. 1
485584146794. 2
485584146795. 3
485584146796. 4

Question Number : 64 Question Id : 48558436699 Question Type : MCQ Option Shuffling : No Is Question Mandatory : No Calculator : None Response Time : N.A Think Time : N.A Minimum Instruction Time : 0

Correct Marks : 5 Wrong Marks : 1

Question Key Details :

Key	Value
Comprehension	MCQ

ସିଖର ਤେ ଖୁଲେ ਇੱକ୍ ସିଲିଣ୍ଡର ਵାଲେ ଡାଣ୍ଡେ ଦା ଦିଆସ 28 cm ଅଡେ ଉଚ୍ଚାଣି 10 cm ਹੈ। ₹50 ਪୁଣି 100 cm² ଦି ଚର ନାଲ ଅନ୍ଦର ତେଁ ଇସନ୍ତୁ ଟିନ ପଲେଟ କରନ ଦି କିମତ୍ତ ਹੈ।

$$\left(\text{ପୁଞ୍ଜେଗ} \pi = \frac{22}{7}\right)$$

1. ₹748
2. ₹813
3. ₹695
4. ₹705

Options :

485584146793. 1
485584146794. 2
485584146795. 3
485584146796. 4

Question Number : 64 Question Id : 48558436699 Question Type : MCQ Option Shuffling : No Is Question Mandatory : No Calculator : None Response Time : N.A Think Time : N.A Minimum Instruction Time : 0

Correct Marks : 5 Wrong Marks : 1

Question Key Details :

Key	Value
Comprehension	MCQ

ஒரு உருளை வடிவ பாத்திர மூடியின் மேல் பகுதியின் விட்டம் 28 cm மற்றும் உயரம் 10 cm என்க. 100 cm^2 -க்கு ரூபாய்(₹) 50 என்ற விகிதத்தில் அதன் உட்பரப்பில் தகரம் பதிக்க (டின்-பிளேட்டிங்) செய்ய எவ்வளவு செலவாகும்? ($\pi = \frac{22}{7}$ என்க)

1. ₹748
2. ₹813
3. ₹695
4. ₹705

Options :

485584146793. 1
 485584146794. 2
 485584146795. 3
 485584146796. 4

Question Number : 64 Question Id : 48558436699 Question Type : MCQ Option Shuffling : No Is Question Mandatory : No Calculator : None Response Time : N.A Think Time : N.A Minimum Instruction Time : 0

Correct Marks : 5 Wrong Marks : 1

Question Key Details :

Key	Value
Comprehension	MCQ

பைபாஸ்களில் தோண்டிய ஒரு ஸ்டூபாக்கார பாத்திர வாய்ப்பு 28 cm மரையும் மற்றும் 10 cm உயரம் கொண்டது. 100 cm^2 க்கு ₹50 செலவு செய்ய வேண்டிய டின்-பிளேட்டிங் கட்டும்:

$$\left(\pi = \frac{22}{7}\right)$$

1. ₹748
2. ₹813
3. ₹695
4. ₹705

Options :

485584146793. 1
 485584146794. 2
 485584146795. 3
 485584146796. 4

Question Number : 64 Question Id : 48558436699 Question Type : MCQ Option Shuffling : No Is Question Mandatory : No Calculator : None Response Time : N.A Think Time : N.A Minimum Instruction Time : 0

Correct Marks : 5 Wrong Marks : 1

Question Key Details :

Key	Value
Comprehension	MCQ

ایک اسطوانی برتن جو اوپر سے کھلتا ہے اس کا ڈایامیٹر 28cm ہے اور اونچائی 10cm اس کی اندر سے اگر 100cm^2 روپے 50 کے حساب سے ٹن پلیٹینگ کی جائے تو اس کی کل قیمت کتنی ہوگی؟

$$\left(\text{Use } \pi = \frac{22}{7}\right)$$

1. ₹748
2. ₹813
3. ₹695
4. ₹705

Options :

485584146793. 1
485584146794. 2
485584146795. 3
485584146796. 4

Question Number : 65 Question Id : 48558436700 Question Type : MCQ Option Shuffling : No Is Question Mandatory : No Calculator : None Response Time : N.A Think Time : N.A Minimum Instruction Time : 0

Correct Marks : 5 Wrong Marks : 1

Question Key Details :

Key	Value
Comprehension	MCQ

A and B can do a piece of work in 72 days; B and C can do it in 120 days, while A and C can do it in 90 days. In what time can A alone do it ?

1. 80 days
2. 100 days
3. 120 days
4. 150 days

Options :

485584146797. 1
485584146798. 2
485584146799. 3
485584146800. 4

Question Number : 65 Question Id : 48558436700 Question Type : MCQ Option Shuffling : No Is Question Mandatory : No Calculator : None Response Time : N.A Think Time : N.A Minimum Instruction Time : 0

Correct Marks : 5 Wrong Marks : 1

Question Key Details :

Key	Value
Comprehension	MCQ

A तथा B किसी कार्य को 72 दिनों में पूरा कर सकते हैं; B तथा C इसे 120 दिनों में कर सकते हैं जबकि A तथा C उसे 90 दिनों में कर सकते हैं। A अकेला इस कार्य को कितने दिनों में पूरा कर सकेगा?

1. 80 दिन
2. 100 दिन
3. 120 दिन
4. 150 दिन

Options :

485584146797. 1
485584146798. 2
485584146799. 3
485584146800. 4

Question Number : 65 Question Id : 48558436700 Question Type : MCQ Option Shuffling : No Is Question Mandatory : No Calculator : None Response Time : N.A Think Time : N.A Minimum Instruction Time : 0

Correct Marks : 5 Wrong Marks : 1

Question Key Details :

Key	Value
Comprehension	MCQ

A आरु B -ये लग है एटा काम 72 दिनत सम्पन्न करे; B आरु C-ये 120 दिनत आरु A आरु C-ये 90 दिनत सम्पन्न करिब पावे। A-इ अकले किमान दिनत कामटो सम्पन्न करिब पाविब?

1. 80 दिन
2. 100 दिन
3. 120 दिन
4. 150 दिन

Options :

485584146797. 1
485584146798. 2
485584146799. 3
485584146800. 4

Question Number : 65 Question Id : 48558436700 Question Type : MCQ Option Shuffling : No Is Question Mandatory : No Calculator : None Response Time : N.A Think Time : N.A Minimum Instruction Time : 0

Correct Marks : 5 Wrong Marks : 1

Question Key Details :

Key	Value
Comprehension	MCQ

કાજેર ંકઁટલ અંશ A ંવં B કરતે પારે 72 ઁને B ંવં C કરતે પારે 120 ઁને યેઁને A ંવં C કરતે પારે 90 ઁને। A ર ંકઁઁ કઁઁટલ કરતે કત સમય લઁગવે ?

1. 80 ઁન
2. 100 ઁન
3. 120 ઁન
4. 150 ઁન

Options :

485584146797. 1
485584146798. 2
485584146799. 3
485584146800. 4

Question Number : 65 Question Id : 48558436700 Question Type : MCQ Option Shuffling : No Is Question Mandatory : No Calculator : None Response Time : N.A Think Time : N.A Minimum Instruction Time : 0

Correct Marks : 5 Wrong Marks : 1

Question Key Details :

Key	Value
Comprehension	MCQ

ંક કઁમ A ંને B 72 ઁવસઁ ં. B ંને C 120 ઁવસઁ કરે ં જ્યઁરે A ંને C તેને 90 ઁવસઁ કરે ં. ંકલો A તે કઁમ કેટલો સમય ઁ ં કરી શકશે?

1. 80 ઁવસઁ
2. 100 ઁવસઁ
3. 120 ઁવસઁ
4. 150 ઁવસઁ

Options :

485584146797. 1
485584146798. 2
485584146799. 3
485584146800. 4

Question Number : 65 Question Id : 48558436700 Question Type : MCQ Option Shuffling : No Is Question Mandatory : No Calculator : None Response Time : N.A Think Time : N.A Minimum Instruction Time : 0

Correct Marks : 5 Wrong Marks : 1

Question Key Details :

Key	Value
Comprehension	MCQ

A ಮತ್ತು B ಒಂದು ಸಣ್ಣ ಕೆಲಸವನ್ನು 72 ದಿನಗಳಲ್ಲಿ ಮಾಡಬಲ್ಲರು; B ಮತ್ತು C ಇದನ್ನು 120 ದಿನಗಳಲ್ಲಿ ಮಾಡಬಲ್ಲರು. ಹಾಗೆಯೇ A ಮತ್ತು C ಇದನ್ನು 90 ದಿನಗಳಲ್ಲಿ ಮಾಡಬಲ್ಲರು. A ಒಬ್ಬನೇ ಈ ಕೆಲಸವನ್ನು ಎಷ್ಟು ಸಮಯದಲ್ಲಿ ಮಾಡಬಲ್ಲನು?

1. 80 ದಿನಗಳು
2. 100 ದಿನಗಳು
3. 120 ದಿನಗಳು
4. 150 ದಿನಗಳು

Options :

485584146797. 1
 485584146798. 2
 485584146799. 3
 485584146800. 4

Question Number : 65 Question Id : 48558436700 Question Type : MCQ Option Shuffling : No Is Question Mandatory : No Calculator : None Response Time : N.A Think Time : N.A Minimum Instruction Time : 0

Correct Marks : 5 Wrong Marks : 1

Question Key Details :

Key	Value
Comprehension	MCQ

A ಯುಂ B ಯುಂ ಕ್ಕುಡಿ 72 ದಿವಸುಣ್ಣಲ್ಲಿ ಪುರಿತ್ತಿಯಾಕ್ಕುಣ್ಣ ಂರು ಜ್ಜಾಲಿ B ಯುಂ C ಯುಂ 120 ದಿವಸುಣ್ಣಲ್ಲಿ A ಯುಂ C ಯುಂ ಕ್ಕುಡಿ 90 ದಿವಸುಣ್ಣಲ್ಲಿ ಪುರಿತ್ತಿಯಾಕ್ಕುಂ . ಂಘಿಣ್ಣಿಲ್ಲಿ A ಂಢ್ಢುಣ್ಣ ಂಢ್ಢು ಜ್ಜಾಲಿ ಂಢ್ಢು ದಿವಸುಂ ಂಢ್ಢುಣ್ಣ ಪುರಿತ್ತಿಯಾಕ್ಕುಂ ?

1. 80 ದಿವಸುಂ
2. 100 ದಿವಸುಂ
3. 120 ದಿವಸುಂ
4. 150 ದಿವಸುಂ

Options :

485584146797. 1
 485584146798. 2
 485584146799. 3
 485584146800. 4

Question Number : 65 Question Id : 48558436700 Question Type : MCQ Option Shuffling : No Is Question Mandatory : No Calculator : None Response Time : N.A Think Time : N.A Minimum Instruction Time : 0

Correct Marks : 5 Wrong Marks : 1

Question Key Details :

Key	Value
Comprehension	MCQ

A आणि B एक काम 72 दिवसात पूर्ण करतात. B आणि C तेच काम 120 दिवसात तर A आणि C 90 दिवसात ते काम पूर्ण करतात. तर एकट्या A ला ते काम करण्यासाठी किती दिवस लागतील?

1. 80 दिवस
2. 100 दिवस
3. 120 दिवस
4. 150 दिवस

Options :

485584146797. 1
485584146798. 2
485584146799. 3
485584146800. 4

Question Number : 65 Question Id : 48558436700 Question Type : MCQ Option Shuffling : No Is Question Mandatory : No Calculator : None Response Time : N.A Think Time : N.A Minimum Instruction Time : 0

Correct Marks : 5 Wrong Marks : 1

Question Key Details :

Key	Value
Comprehension	MCQ

A ଏବଂ B ଗୋଟିଏ କାର୍ଯ୍ୟକୁ 72 ଦିନରେ କରିପାରନ୍ତି। B ଏବଂ C ସେହି କାର୍ଯ୍ୟକୁ 120 ଦିନରେ କରିପାରନ୍ତି, ତେବେ A ଏବଂ C ତାକୁ 90 ଦିନରେ କରିବେ। A ଏକାକୀ ସେହି କାର୍ଯ୍ୟକୁ କେତେଦିନରେ ଶେଷ କରିପାରିବ?

1. 80 ଦିନ
2. 100 ଦିନ
3. 120 ଦିନ
4. 150 ଦିନ

Options :

485584146797. 1
485584146798. 2
485584146799. 3
485584146800. 4

Question Number : 65 Question Id : 48558436700 Question Type : MCQ Option Shuffling : No Is Question Mandatory : No Calculator : None Response Time : N.A Think Time : N.A Minimum Instruction Time : 0

Correct Marks : 5 Wrong Marks : 1

Question Key Details :

Key	Value
Comprehension	MCQ

A ਅਤੇ B ਇੱਕ ਕੰਮ 72 ਦਿਨਾਂ ਵਿੱਚ ਕਰ ਸਕਦੇ ਹਨ, B ਅਤੇ C ਉਸ ਕੰਮ ਨੂੰ 120 ਦਿਨਾਂ ਵਿੱਚ, A ਅਤੇ C 90 ਦਿਨਾਂ ਵਿੱਚ ਕਰ ਸਕਦੇ ਹਨ। ਇਹ ਦੱਸੋ ਕਿ ਇੱਕਲਾ A ਕਿੰਨੇ ਸਮੇਂ ਵਿੱਚ ਕਰ ਸਕਦਾ ਹੈ?

1. 80 ਦਿਨ
2. 100 ਦਿਨ
3. 120 ਦਿਨ
4. 150 ਦਿਨ

Options :

485584146797. 1
485584146798. 2
485584146799. 3
485584146800. 4

Question Number : 65 Question Id : 48558436700 Question Type : MCQ Option Shuffling : No Is Question Mandatory : No Calculator : None Response Time : N.A Think Time : N.A Minimum Instruction Time : 0

Correct Marks : 5 Wrong Marks : 1

Question Key Details :

Key	Value
Comprehension	MCQ

A ਮற்றੂਮ B ਆਕਿਯੋਯਾਰ ਓਰੁ ਵੇਲੇਯੇ ਮੁਢਿਕਕ 72 ਏਠੁੱਤੁਕਕੋਕੋਯੋਕਿੰਨੇਰਨੇਰ: ਅਠੇ ਵੇਲੇਯੇ B ਮற்றੂਮ C ਆਕਿਯੋਯਾਰ ਮੁਢਿਕਕ 120 ਨਾਢਕੋਕੋ ਆਕਿਰੇਠੁ, ਮੇਲੁਮ A ਮற்றੂਮ C ਆਕਿਯੋਯਾਰ 90 ਨਾਢਕੋਕੋ ਏਠੁੱਤੁਕਕੋਕੋਯੋਕਿੰਨੇਰਨੇਰ. ਏਨੇਲ A ਏਨੇਪਵਰ ਤਨੇਯਾਕ ਅਨਠ ਵੇਲੇਯੇ ਮੁਢਿਕਕ ਏਵਵਏਯ ਕਾਲਮ ਆਕੁਮ?

1. 80 ਨਾਢਕੋਕੋ
2. 100 ਨਾਢਕੋਕੋ
3. 120 ਨਾਢਕੋਕੋ
4. 150 ਨਾਢਕੋਕੋ

Options :

485584146797. 1
485584146798. 2
485584146799. 3
485584146800. 4

Question Number : 65 Question Id : 48558436700 Question Type : MCQ Option Shuffling : No Is Question Mandatory : No Calculator : None Response Time : N.A Think Time : N.A Minimum Instruction Time : 0

Correct Marks : 5 Wrong Marks : 1

Question Key Details :

Key	Value
Comprehension	MCQ

A మరియు B ఒక పనిని 72 రోజులలో చేయగలరు. B మరియు C 120 రోజులలో చేయగలరు అయితే A మరియు C దీనిని 90 రోజులలో చేయగలరు. A ఒక్కడు ఒంటరిగా ఎంత సమయంలో చేయగలడు ?

1. 80 రోజులు
2. 100 రోజులు
3. 120 రోజులు
4. 150 రోజులు

Options :

485584146797. 1
485584146798. 2
485584146799. 3
485584146800. 4

Question Number : 65 Question Id : 48558436700 Question Type : MCQ Option Shuffling : No Is Question Mandatory : No Calculator : None Response Time : N.A Think Time : N.A Minimum Instruction Time : 0

Correct Marks : 5 Wrong Marks : 1

Question Key Details :

Key	Value
Comprehension	MCQ

A اور B دونوں مل کر ایک کام 72 دنوں میں کرتے ہیں، B اور C اسے 120 دنوں میں کرتے ہیں، جبکہ A اور C اسے 90 دنوں میں کرتے ہیں۔ اس کام کو صرف A کتنے دنوں میں کر سکتا ہے ؟

1. دن 80
2. دن 100
3. دن 120
4. دن 150

Options :

485584146797. 1
485584146798. 2
485584146799. 3
485584146800. 4

Question Number : 66 Question Id : 48558436701 Question Type : MCQ Option Shuffling : No Is Question Mandatory : No Calculator : None Response Time : N.A Think Time : N.A Minimum Instruction Time : 0

Correct Marks : 5 Wrong Marks : 1

Question Key Details :

Key	Value
Comprehension	MCQ

An athlete runs 200 meter race in 24 seconds. His speed is

1. 20 km/h
2. 24 km/h
3. 28.5 km/h
4. 30 km/h

Options :

485584146801. 1
485584146802. 2
485584146803. 3
485584146804. 4

Question Number : 66 Question Id : 48558436701 Question Type : MCQ Option Shuffling : No Is Question Mandatory : No Calculator : None Response Time : N.A Think Time : N.A Minimum Instruction Time : 0

Correct Marks : 5 Wrong Marks : 1

Question Key Details :

Key	Value
Comprehension	MCQ

एक धावक 24 सेकंडों में 200 मीटर दौड़ता है। उसकी गति है (km/h में):

1. 20 km/h
2. 24 km/h
3. 28.5 km/h
4. 30 km/h

Options :

485584146801. 1
485584146802. 2
485584146803. 3
485584146804. 4

Question Number : 66 Question Id : 48558436701 Question Type : MCQ Option Shuffling : No Is Question Mandatory : No Calculator : None Response Time : N.A Think Time : N.A Minimum Instruction Time : 0

Correct Marks : 5 Wrong Marks : 1

Question Key Details :

Key	Value
Comprehension	MCQ

এজন ক্রীড়াবিদে 200 মিটার দৌৰ 24 ছেকেণ্ডত সম্পূৰ্ণ কৰে। তেওঁৰ দ্রুতি হৈছে:

1. 20 km/h
2. 24 km/h
3. 28.5 km/h
4. 30 km/h

Options :

485584146801. 1
485584146802. 2
485584146803. 3
485584146804. 4

Question Number : 66 Question Id : 48558436701 Question Type : MCQ Option Shuffling : No Is Question Mandatory : No Calculator : None Response Time : N.A Think Time : N.A Minimum Instruction Time : 0

Correct Marks : 5 Wrong Marks : 1

Question Key Details :

Key	Value
Comprehension	MCQ

একজন ক্রীড়াবিদ 200 মিটার দৌড়াতে সময় নেয় 24 সেকেণ্ড। তাহলে তার গতি হৈছে:

1. 20 km/h
2. 24 km/h
3. 28.5 km/h
4. 30 km/h

Options :

485584146801. 1
485584146802. 2
485584146803. 3
485584146804. 4

Question Number : 66 Question Id : 48558436701 Question Type : MCQ Option Shuffling : No Is Question Mandatory : No Calculator : None Response Time : N.A Think Time : N.A Minimum Instruction Time : 0

Correct Marks : 5 Wrong Marks : 1

Question Key Details :

Key	Value
Comprehension	MCQ

એક રમતવિર 24 સેકન્ડમાં 200 મીટરની રેસ દોડે છે. તો તેની ગતિ શોધો.

1. 20 km/h
2. 24 km/h
3. 28.5 km/h
4. 30 km/h

Options :

485584146801. 1
485584146802. 2
485584146803. 3
485584146804. 4

Question Number : 66 Question Id : 48558436701 Question Type : MCQ Option Shuffling : No Is Question Mandatory : No Calculator : None Response Time : N.A Think Time : N.A Minimum Instruction Time : 0

Correct Marks : 5 Wrong Marks : 1

Question Key Details :

Key	Value
Comprehension	MCQ

ಒಬ್ಬ ಕ್ರೀಡಾಪಟು 200 ಮೀಟರ್ ಓಟದ ಸ್ಪર્ಧೆಯನ್ನು 24 ಸೆಕೆಂಡ್‌ಗಳಲ್ಲಿ ಓಡಬಲ್ಲನು. ಅವನ ವೇಗವು:

1. 20 km/h
2. 24 km/h
3. 28.5 km/h
4. 30 km/h

Options :

485584146801. 1
485584146802. 2
485584146803. 3
485584146804. 4

Question Number : 66 Question Id : 48558436701 Question Type : MCQ Option Shuffling : No Is Question Mandatory : No Calculator : None Response Time : N.A Think Time : N.A Minimum Instruction Time : 0

Correct Marks : 5 Wrong Marks : 1

Question Key Details :

Key	Value
Comprehension	MCQ

ഒരു അത്ലറ്റ് 200M , 24 സെക്കൻഡ് കൊണ്ട് ഓടി തീർത്താൽ അയാളുടെ വേഗത എത്ര ?

1. 20 km/h
2. 24 km/h
3. 28.5 km/h
4. 30 km/h

Options :

485584146801. 1
485584146802. 2
485584146803. 3
485584146804. 4

Question Number : 66 Question Id : 48558436701 Question Type : MCQ Option Shuffling : No Is Question Mandatory : No Calculator : None Response Time : N.A Think Time : N.A Minimum Instruction Time : 0

Correct Marks : 5 Wrong Marks : 1

Question Key Details :

Key	Value
Comprehension	MCQ

एक क्रीडापटू 200 मीटर धावण्याची शर्यत 24 सेकंदात पूर्ण करतो, तर त्याचा वेग -

1. 20 किमी/तास
2. 24 किमी/तास
3. 28.5 किमी/तास
4. 30 किमी/तास

Options :

485584146801. 1
485584146802. 2
485584146803. 3
485584146804. 4

Question Number : 66 Question Id : 48558436701 Question Type : MCQ Option Shuffling : No Is Question Mandatory : No Calculator : None Response Time : N.A Think Time : N.A Minimum Instruction Time : 0

Correct Marks : 5 Wrong Marks : 1

Question Key Details :

Key	Value
Comprehension	MCQ

ଜଣେ ଧାବକ 200 ମିଟର ବୌଦ୍ଧକୁ 24 ସେକେଣ୍ଡରେ ପୂର୍ଣ୍ଣ କରେ। ତାର ଗତି କେତେ

1. 20 କିମି ପ୍ରତି ଘଣ୍ଟା
2. 24 କିମି ପ୍ରତି ଘଣ୍ଟା
3. 28.5 କିମି ପ୍ରତି ଘଣ୍ଟା
4. 30 କିମି ପ୍ରତି ଘଣ୍ଟା

Options :

485584146801. 1
485584146802. 2
485584146803. 3
485584146804. 4

Question Number : 66 Question Id : 48558436701 Question Type : MCQ Option Shuffling : No Is Question Mandatory : No Calculator : None Response Time : N.A Think Time : N.A Minimum Instruction Time : 0

Correct Marks : 5 Wrong Marks : 1

Question Key Details :

Key	Value
Comprehension	MCQ

ਇੱਕ ਖਿਡਾਰੀ 24 ਸੇਕਿੰਟ ਵਿੱਚ 200 ਮੀਟਰ ਦੌੜ ਦੌੜਦਾ ਹੈ। ਉਸਦੀ ਗਤੀ ਹੈ?

1. 20 km/h
2. 24 km/h
3. 28.5 km/h
4. 30 km/h

Options :

485584146801. 1
485584146802. 2
485584146803. 3
485584146804. 4

Question Number : 66 Question Id : 48558436701 Question Type : MCQ Option Shuffling : No Is Question Mandatory : No Calculator : None Response Time : N.A Think Time : N.A Minimum Instruction Time : 0

Correct Marks : 5 Wrong Marks : 1

Question Key Details :

Key	Value
Comprehension	MCQ

ஒரு தடகள வீரர் ஓட்டப்பந்தயத்தில் 200 மீட்டர் தொலைவை 24 வினாடிகளில் கடக்கிறார், எனில் அவரது வேகம் என்ன?

1. 20 km/h
2. 24 km/h
3. 28.5 km/h
4. 30 km/h

Options :

485584146801. 1
485584146802. 2
485584146803. 3
485584146804. 4

Question Number : 66 Question Id : 48558436701 Question Type : MCQ Option Shuffling : No Is Question Mandatory : No Calculator : None Response Time : N.A Think Time : N.A Minimum Instruction Time : 0

Correct Marks : 5 Wrong Marks : 1

Question Key Details :

Key	Value
Comprehension	MCQ

ఒక అథ్లెట్ 24 సెకండ్లలో 200 మీటర్ల పరుగు పంచెం పరుగెత్తాడు. అతని వేగం ఎంత:

1. 20 km/h
2. 24 km/h
3. 28.5 km/h
4. 30 km/h

Options :

485584146801. 1
485584146802. 2
485584146803. 3
485584146804. 4

Question Number : 66 Question Id : 48558436701 Question Type : MCQ Option Shuffling : No Is Question Mandatory : No Calculator : None Response Time : N.A Think Time : N.A Minimum Instruction Time : 0

Correct Marks : 5 Wrong Marks : 1

Question Key Details :

Key	Value
Comprehension	MCQ

ایک ورزش کار 200 میٹر کی ریس کو 24 سیکنڈ میں پورا کرتا ہے۔ اس کی رفتار کیا ہوگی ؟

1. 20 km/h
2. 24 km/h
3. 28.5 km/h
4. 30 km/h

Options :

485584146801. 1
485584146802. 2
485584146803. 3
485584146804. 4

Question Number : 67 Question Id : 48558436702 Question Type : MCQ Option Shuffling : No Is Question Mandatory : No Calculator : None Response Time : N.A Think Time : N.A Minimum Instruction Time : 0

Correct Marks : 5 Wrong Marks : 1

Question Key Details :

Key	Value
Comprehension	MCQ

A man performs $\frac{3}{5}$ of the total journey by rail, $\frac{7}{20}$ of the journey by bus and the remaining 6.5 km on foot. What is his total journey (in km)?

1. 65
2. 100
3. 120
4. 130

Options :

485584146805. 1
485584146806. 2
485584146807. 3
485584146808. 4

Question Number : 67 Question Id : 48558436702 Question Type : MCQ Option Shuffling : No Is Question Mandatory : No Calculator : None Response Time : N.A Think Time : N.A Minimum Instruction Time : 0

Correct Marks : 5 Wrong Marks : 1

Question Key Details :

Key	Value
Comprehension	MCQ

एक व्यक्ति अपनी पूरी यात्रा का $\frac{3}{5}$ भाग रेलगाड़ी से, $\frac{7}{20}$ भाग बस से तथा शेष 6.5 कि.मी पैदल चलकर तय करता है। उसकी कुल यात्रा कितने कि.मी. है?

1. 65
2. 100
3. 120
4. 130

Options :

485584146805. 1
485584146806. 2
485584146807. 3
485584146808. 4

Question Number : 67 Question Id : 48558436702 Question Type : MCQ Option Shuffling : No Is Question Mandatory : No Calculator : None Response Time : N.A Think Time : N.A Minimum Instruction Time : 0

Correct Marks : 5 Wrong Marks : 1

Question Key Details :

Key	Value
Comprehension	MCQ

এজন মানুহে নিজৰ মুঠ যাত্ৰাপথৰ $\frac{3}{5}$ ভাগ ৰেলেৰে, $\frac{7}{20}$ ভাগ বাছেৰে আৰু বাকী থকা 6.5 km খোজকাঢ়ি সম্পূৰ্ণ কৰে। তেওঁৰ সৰ্বমুঠ যাত্ৰাপথটো (kmত) কিমান দীঘল হ'ব?

1. 65
2. 100
3. 120
4. 130

Options :

485584146805. 1
485584146806. 2
485584146807. 3
485584146808. 4

Question Number : 67 Question Id : 48558436702 Question Type : MCQ Option Shuffling : No Is Question Mandatory : No Calculator : None Response Time : N.A Think Time : N.A Minimum Instruction Time : 0

Correct Marks : 5 Wrong Marks : 1

Question Key Details :

Key	Value
Comprehension	MCQ

একজন ব্যক্তি তার মোট যাত্রার $\frac{3}{5}$ অংশ রেল, $\frac{7}{20}$ অংশ বাসে এবং বাকি 6.5 কিমি যাত্রা পায়ে করে তাহলে তিনি মোট কত কিলোমিটার যাত্রা করেন?

1. 65
2. 100
3. 120
4. 130

Options :

485584146805. 1
485584146806. 2
485584146807. 3
485584146808. 4

Question Number : 67 Question Id : 48558436702 Question Type : MCQ Option Shuffling : No Is Question Mandatory : No Calculator : None Response Time : N.A Think Time : N.A Minimum Instruction Time : 0

Correct Marks : 5 Wrong Marks : 1

Question Key Details :

Key	Value
Comprehension	MCQ

એક વ્યક્તિ તેની કુલ મુસાફરી માંથી $\frac{3}{5}$ રેલ માં કરેલ છે, $\frac{7}{20}$ મુસાફરી બસ માં કરે છે અને બાકી 6.5 km પગે ચાલતા કરે છે. તો તેણે કિલોમીટરમાં કુલ કેટલી મુસાફરી કરી તે શોધો ?

1. 65
2. 100
3. 120
4. 130

Options :

485584146805. 1
485584146806. 2
485584146807. 3
485584146808. 4

Question Number : 67 Question Id : 48558436702 Question Type : MCQ Option Shuffling : No Is Question Mandatory : No Calculator : None Response Time : N.A Think Time : N.A Minimum Instruction Time : 0

Correct Marks : 5 Wrong Marks : 1

Question Key Details :

Key	Value
Comprehension	MCQ

ಒಬ್ಬ ಮನುಷ್ಯ ಒಟ್ಟು ಪ್ರಯಾಣದ $\frac{3}{5}$ ಭಾಗವನ್ನು ರೈಲಿನಲ್ಲಿ, ಪ್ರಯಾಣದ $\frac{7}{20}$ ಭಾಗವನ್ನು ಬಸ್‌ನಲ್ಲಿ ಮತ್ತು ಉಳಿದ 6.5 ಅನ್ನು ನಡಿಗೆ ಮೂಲಕ ಮಾಡುತ್ತಾನೆ. ಅವನ ಒಟ್ಟು ಪ್ರಯಾಣವೇನು(km ಗಳಲ್ಲಿ)?

1. 65
2. 100
3. 120
4. 130

Options :

485584146805. 1
485584146806. 2
485584146807. 3
485584146808. 4

Question Number : 67 Question Id : 48558436702 Question Type : MCQ Option Shuffling : No Is Question Mandatory : No Calculator : None Response Time : N.A Think Time : N.A Minimum Instruction Time : 0

Correct Marks : 5 Wrong Marks : 1

Question Key Details :

Key	Value
Comprehension	MCQ

ಓರು ವ್ಯಕ್ತಿ ಅಯಾಚ್ಚುಡೆ ಯಾತ್ರೆಯುಡೆ $\frac{3}{5}$ ಡಾಹಂ ಡ್ರಯಿಢಿಲಿಂ, $\frac{7}{20}$ ಡಾಹಂ ಢ್ರಸ್ಲಿಲಿಂ, 6.5 km ಕಾಠೆಢಡಯಾಚ್ಚುಂ ಯಾತ್ರ ಡೆಚ್ಚುಂ ಏಕಿಠೆ, ಅಠಕೆ ಯಾತ್ರ ಡೆಚ್ಚುಂ ಡೂರಂ ಏತ್ರ ? (kmಠೆ)

1. 65
2. 100
3. 120
4. 130

Options :

485584146805. 1
485584146806. 2
485584146807. 3
485584146808. 4

Question Number : 67 Question Id : 48558436702 Question Type : MCQ Option Shuffling : No Is Question Mandatory : No Calculator : None Response Time : N.A Think Time : N.A Minimum Instruction Time : 0

Correct Marks : 5 Wrong Marks : 1

Question Key Details :

Key	Value
Comprehension	MCQ

एक व्यक्ति एकूण प्रवासापैकी $\frac{3}{5}$ प्रवास रेल्वेने, $\frac{7}{20}$ प्रवास बसने आणि उर्वरित 6.5 किमी चा प्रवास पायी पूर्ण करते, तर एकूण प्रवास किती (किमी मध्ये)?

1. 65
2. 100
3. 120
4. 130

Options :

485584146805. 1
485584146806. 2
485584146807. 3
485584146808. 4

Question Number : 67 Question Id : 48558436702 Question Type : MCQ Option Shuffling : No Is Question Mandatory : No Calculator : None Response Time : N.A Think Time : N.A Minimum Instruction Time : 0

Correct Marks : 5 Wrong Marks : 1

Question Key Details :

Key	Value
Comprehension	MCQ

ଜଣେ ବ୍ୟକ୍ତି ତାର ସମଗ୍ର ଯାତ୍ରାର $\frac{3}{5}$ ଭେଳ ହାରା, $\frac{7}{20}$ ବସ୍ ହାରା ଏବଂ ଅବଶିଷ୍ଟ 6.5 କିମି ପଦଯାତ୍ରା କରି ସମ୍ପୂର୍ଣ୍ଣ କରେ। ସେ ସମଗ୍ର ଯାତ୍ରା କେତେ କିମି କଲା?

1. 65
2. 100
3. 120
4. 130

Options :

485584146805. 1
485584146806. 2
485584146807. 3
485584146808. 4

Question Number : 67 Question Id : 48558436702 Question Type : MCQ Option Shuffling : No Is Question Mandatory : No Calculator : None Response Time : N.A Think Time : N.A Minimum Instruction Time : 0

Correct Marks : 5 Wrong Marks : 1

Question Key Details :

Key	Value
Comprehension	MCQ

ਇੱਕ ਆਦਮੀ ਰੇਲ ਰਾਹੀਂ ਕੁਲ ਸਫ਼ਰ ਦਾ $\frac{3}{5}$ ਹਿੱਸਾ ਤੈਅ ਕਰਦਾ ਹੈ, ਸਫ਼ਰ ਦਾ $\frac{7}{20}$ ਹਿੱਸਾ ਬਸ ਰਾਹੀਂ ਅਤੇ ਬਾਕੀ 6.5 km ਪੈਦਲ ਤੈਅ ਕਰਦਾ ਹੈ। ਉਸਦੀ ਕੁਲ ਯਾਤਰਾ ਕੀ ਹੈ?

1. 65
2. 100
3. 120
4. 130

Options :

485584146805. 1
485584146806. 2
485584146807. 3
485584146808. 4

Question Number : 67 Question Id : 48558436702 Question Type : MCQ Option Shuffling : No Is Question Mandatory : No Calculator : None Response Time : N.A Think Time : N.A Minimum Instruction Time : 0

Correct Marks : 5 Wrong Marks : 1

Question Key Details :

Key	Value
Comprehension	MCQ

ஒரு நபர் மொத்த பயணதூரத்தில் $\frac{3}{5}$ தொலைவை இரயிலிலும், $\frac{7}{20}$ தொலைவை பேருந்திலும் மற்றும் மீதமுள்ள 6.5 km தொலைவை நடந்தும் கடக்கிறார் எனில், அவரது மொத்த பயண தூரம் என்ன (km இல்)?

1. 65
2. 100
3. 120
4. 130

Options :

485584146805. 1
485584146806. 2
485584146807. 3
485584146808. 4

Question Number : 67 Question Id : 48558436702 Question Type : MCQ Option Shuffling : No Is Question Mandatory : No Calculator : None Response Time : N.A Think Time : N.A Minimum Instruction Time : 0

Correct Marks : 5 Wrong Marks : 1

Question Key Details :

Key	Value
Comprehension	MCQ

ఒక వ్యక్తి మొత్తం ప్రయాణం $\frac{3}{5}$ వంతు రైలు ద్వారా $\frac{7}{20}$ ప్రయాణం బస్సులో మరియు మిగిలిన 6.5 km కాలినడకన చేసాడు. అతని మొత్తం ప్రయాణం ఎంత (km లో)?

1. 65
2. 100
3. 120
4. 130

Options :

485584146805. 1
485584146806. 2
485584146807. 3
485584146808. 4

Question Number : 67 Question Id : 48558436702 Question Type : MCQ Option Shuffling : No Is Question Mandatory : No Calculator : None Response Time : N.A Think Time : N.A Minimum Instruction Time : 0

Correct Marks : 5 Wrong Marks : 1

Question Key Details :

Key	Value
Comprehension	MCQ

6.5 కి.మీ. దూరం మిగిలిపోయింది మరియు మిగిలిన $\frac{3}{5}$ ప్రయాణం రైలు ద్వారా $\frac{7}{20}$ ప్రయాణం బస్సులో మరియు మిగిలిన 6.5 km కాలినడకన చేసాడు. అతని మొత్తం ప్రయాణం ఎంత (km లో)?

1. 65
2. 100
3. 120
4. 130

Options :

485584146805. 1
485584146806. 2
485584146807. 3
485584146808. 4

Question Number : 68 Question Id : 48558436703 Question Type : MCQ Option Shuffling : No Is Question Mandatory : No Calculator : None Response Time : N.A Think Time : N.A Minimum Instruction Time : 0

Correct Marks : 5 Wrong Marks : 1

Question Key Details :

Key	Value
Comprehension	MCQ

By how much is $\frac{3}{4}$ of 568 less than $\frac{7}{8}$ of 1008 ?

1. 444
2. 448
3. 452
4. 456

Options :

485584146809. 1
485584146810. 2
485584146811. 3
485584146812. 4

Question Number : 68 Question Id : 48558436703 Question Type : MCQ Option Shuffling : No Is Question Mandatory : No Calculator : None Response Time : N.A Think Time : N.A Minimum Instruction Time : 0

Correct Marks : 5 Wrong Marks : 1

Question Key Details :

Key	Value
Comprehension	MCQ

568 का $\frac{3}{4}$, 1008 के $\frac{7}{8}$ से कितना कम है?

1. 444
2. 448
3. 452
4. 456

Options :

485584146809. 1
485584146810. 2
485584146811. 3
485584146812. 4

Question Number : 68 Question Id : 48558436703 Question Type : MCQ Option Shuffling : No Is Question Mandatory : No Calculator : None Response Time : N.A Think Time : N.A Minimum Instruction Time : 0

Correct Marks : 5 Wrong Marks : 1

Question Key Details :

Key	Value
Comprehension	MCQ

568 ৰ $\frac{3}{4}$ ভাগ 1008 ৰ $\frac{7}{8}$ তকৈ কিমান কম ?

1. 444
2. 448
3. 452
4. 456

Options :

485584146809. 1
485584146810. 2
485584146811. 3
485584146812. 4

Question Number : 68 Question Id : 48558436703 Question Type : MCQ Option Shuffling : No Is Question Mandatory : No Calculator : None Response Time : N.A Think Time : N.A Minimum Instruction Time : 0

Correct Marks : 5 Wrong Marks : 1

Question Key Details :

Key	Value
Comprehension	MCQ

1008 এর $\frac{7}{8}$ -ৰ থেকে 568 এর $\frac{3}{4}$ কত কম?

1. 444
2. 448
3. 452
4. 456

Options :

485584146809. 1
485584146810. 2
485584146811. 3
485584146812. 4

Question Number : 68 Question Id : 48558436703 Question Type : MCQ Option Shuffling : No Is Question Mandatory : No Calculator : None Response Time : N.A Think Time : N.A Minimum Instruction Time : 0

Correct Marks : 5 Wrong Marks : 1

Question Key Details :

Key	Value
Comprehension	MCQ

568 નું $\frac{3}{4}$, 1008 કે $\frac{7}{8}$ કરતા કેટલું ઓછું છે.

1. 444
2. 448
3. 452
4. 456

Options :

485584146809. 1
485584146810. 2
485584146811. 3
485584146812. 4

Question Number : 68 Question Id : 48558436703 Question Type : MCQ Option Shuffling : No Is Question Mandatory : No Calculator : None Response Time : N.A Think Time : N.A Minimum Instruction Time : 0

Correct Marks : 5 Wrong Marks : 1

Question Key Details :

Key	Value
Comprehension	MCQ

568ರ $\frac{3}{4}$ ಭાગવું 1008ર $\frac{7}{8}$ ભાગકિંત્ર ંષુ કડિમ્ ઙદે?

1. 444
2. 448
3. 452
4. 456

Options :

485584146809. 1
485584146810. 2
485584146811. 3
485584146812. 4

Question Number : 68 Question Id : 48558436703 Question Type : MCQ Option Shuffling : No Is Question Mandatory : No Calculator : None Response Time : N.A Think Time : N.A Minimum Instruction Time : 0

Correct Marks : 5 Wrong Marks : 1

Question Key Details :

Key	Value
Comprehension	MCQ

1008 च्या $\frac{7}{8}$ पेक्षा 568 च्या $\frac{3}{4}$ हा कितीने कमी आहे ?

1. 444
2. 448
3. 452
4. 456

Options :

485584146809. 1
485584146810. 2
485584146811. 3
485584146812. 4

Question Number : 68 Question Id : 48558436703 Question Type : MCQ Option Shuffling : No Is Question Mandatory : No Calculator : None Response Time : N.A Think Time : N.A Minimum Instruction Time : 0

Correct Marks : 5 Wrong Marks : 1

Question Key Details :

Key	Value
Comprehension	MCQ

1008 च्या $\frac{7}{8}$ पेक्षा 568 चा $\frac{3}{4}$ हा कितीने कमी आहे?

1. 444
2. 448
3. 452
4. 456

Options :

485584146809. 1
485584146810. 2
485584146811. 3
485584146812. 4

Question Number : 68 Question Id : 48558436703 Question Type : MCQ Option Shuffling : No Is Question Mandatory : No Calculator : None Response Time : N.A Think Time : N.A Minimum Instruction Time : 0

Correct Marks : 5 Wrong Marks : 1

Question Key Details :

Key	Value
Comprehension	MCQ

568 ର $\frac{3}{4}$, 1008 ର $\frac{7}{8}$ ଠାରୁ କେତେ କମ୍?

1. 444
2. 448
3. 452
4. 456

Options :

485584146809. 1
485584146810. 2
485584146811. 3
485584146812. 4

Question Number : 68 Question Id : 48558436703 Question Type : MCQ Option Shuffling : No Is Question Mandatory : No Calculator : None Response Time : N.A Think Time : N.A Minimum Instruction Time : 0

Correct Marks : 5 Wrong Marks : 1

Question Key Details :

Key	Value
Comprehension	MCQ

568 ਦਾ $\frac{3}{4}$ 1008 ਦੇ $\frac{7}{8}$ ਨਾਲੋਂ ਕਿੰਨਾ ਘੱਟ ਹੈ?

1. 444
2. 448
3. 452
4. 456

Options :

485584146809. 1
485584146810. 2
485584146811. 3
485584146812. 4

Question Number : 68 Question Id : 48558436703 Question Type : MCQ Option Shuffling : No Is Question Mandatory : No Calculator : None Response Time : N.A Think Time : N.A Minimum Instruction Time : 0

Correct Marks : 5 Wrong Marks : 1

Question Key Details :

Key	Value
Comprehension	MCQ

568 இல் $\frac{3}{4}$ என்பது 1008 இல் $\frac{7}{8}$ என்பதை விட எவ்வளவு குறைவாக இருக்கும்?

1. 444
2. 448
3. 452
4. 456

Options :

485584146809. 1
485584146810. 2
485584146811. 3
485584146812. 4

Question Number : 68 Question Id : 48558436703 Question Type : MCQ Option Shuffling : No Is Question Mandatory : No Calculator : None Response Time : N.A Think Time : N.A Minimum Instruction Time : 0

Correct Marks : 5 Wrong Marks : 1

Question Key Details :

Key	Value
Comprehension	MCQ

1008 లో $\frac{7}{8}$ వ వంతు కంటే 568 లో $\frac{3}{4}$ వ వంతు ఎంత తక్కువ?

1. 444
2. 448
3. 452
4. 456

Options :

485584146809. 1
485584146810. 2
485584146811. 3
485584146812. 4

Question Number : 68 Question Id : 48558436703 Question Type : MCQ Option Shuffling : No Is Question Mandatory : No Calculator : None Response Time : N.A Think Time : N.A Minimum Instruction Time : 0

Correct Marks : 5 Wrong Marks : 1

Question Key Details :

Key	Value
Comprehension	MCQ

568 کا $\frac{3}{4}$ حصہ، 1008 کے $\frac{7}{8}$ حصوں سے کتنا کم ہے؟

1. 444
2. 448
3. 452
4. 456

Options :

485584146809. 1
485584146810. 2
485584146811. 3
485584146812. 4

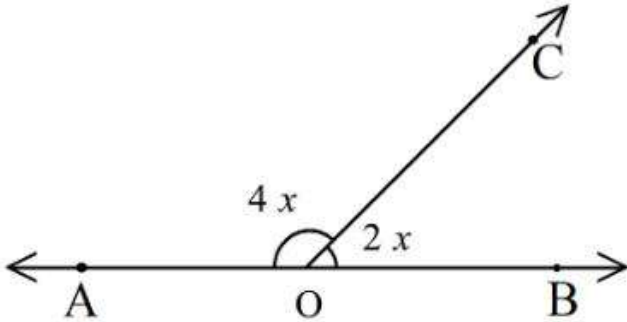
Question Number : 69 Question Id : 48558436704 Question Type : MCQ Option Shuffling : No Is Question Mandatory : No Calculator : None Response Time : N.A Think Time : N.A Minimum Instruction Time : 0

Correct Marks : 5 Wrong Marks : 1

Question Key Details :

Key	Value
Comprehension	MCQ

In the figure, $\angle AOC$ and $\angle BOC$ form a linear pair. The value of x is



1. 30°
2. 25°
3. 40°
4. 15°

Options :

485584146813. 1
485584146814. 2
485584146815. 3
485584146816. 4

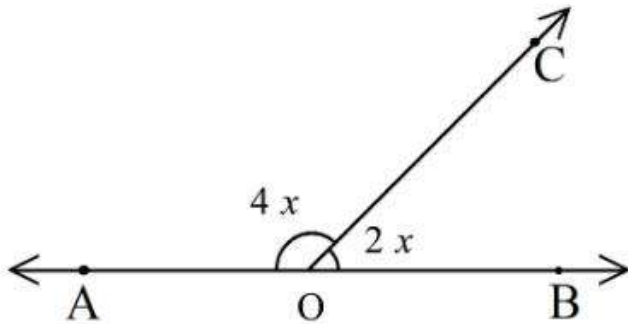
Question Number : 69 Question Id : 48558436704 Question Type : MCQ Option Shuffling : No Is Question Mandatory : No Calculator : None Response Time : N.A Think Time : N.A Minimum Instruction Time : 0

Correct Marks : 5 Wrong Marks : 1

Question Key Details :

Key	Value
Comprehension	MCQ

आकृति में, $\angle AOC$ तथा $\angle BOC$ एक रैखिक युग्म बनाते हैं। x का मान है:



1. 30°
2. 25°
3. 40°
4. 15°

Options :

485584146813. 1
485584146814. 2
485584146815. 3
485584146816. 4

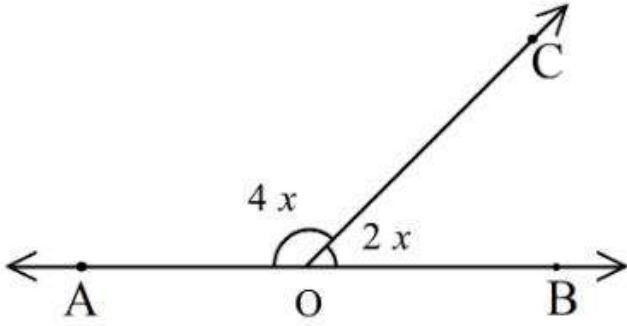
Question Number : 69 Question Id : 48558436704 Question Type : MCQ Option Shuffling : No Is Question Mandatory : No Calculator : None Response Time : N.A Think Time : N.A Minimum Instruction Time : 0

Correct Marks : 5 Wrong Marks : 1

Question Key Details :

Key	Value
Comprehension	MCQ

এই চিত্রত, $\angle AOC$ আৰু $\angle BOC$ এ এটা বৈখিক যোৰ সজাইছে। x ৰ মান হ'বঃ



1. 30°
2. 25°
3. 40°
4. 15°

Options :

485584146813. 1
485584146814. 2
485584146815. 3
485584146816. 4

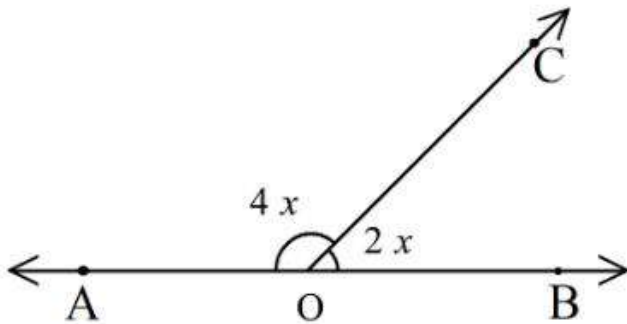
Question Number : 69 Question Id : 48558436704 Question Type : MCQ Option Shuffling : No Is Question Mandatory : No Calculator : None Response Time : N.A Think Time : N.A Minimum Instruction Time : 0

Correct Marks : 5 Wrong Marks : 1

Question Key Details :

Key	Value
Comprehension	MCQ

চিত্রে, $\angle AOC$ এবং $\angle BOC$ একটি বৈখিক জোড়া তৈরি করে, তাহলে x এর মান হ'বেঃ



1. 30°
2. 25°
3. 40°
4. 15°

Options :

485584146813. 1
485584146814. 2
485584146815. 3
485584146816. 4

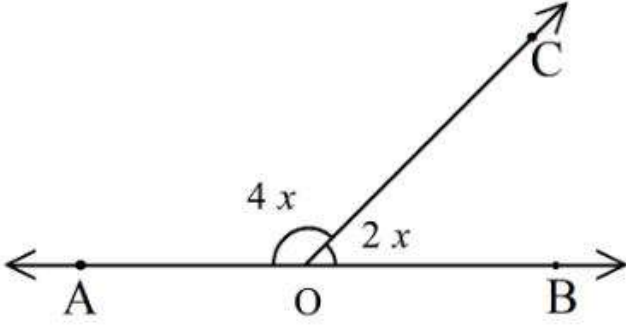
Question Number : 69 Question Id : 48558436704 Question Type : MCQ Option Shuffling : No Is Question Mandatory : No Calculator : None Response Time : N.A Think Time : N.A Minimum Instruction Time : 0

Correct Marks : 5 Wrong Marks : 1

Question Key Details :

Key	Value
Comprehension	MCQ

આકૃતિમાં $\angle AOC$ અને $\angle BOC$ રેખીય જોડી બનાવે છે. x ની કિંમત શોધો.



1. 30°
2. 25°
3. 40°
4. 15°

Options :

485584146813. 1
485584146814. 2
485584146815. 3
485584146816. 4

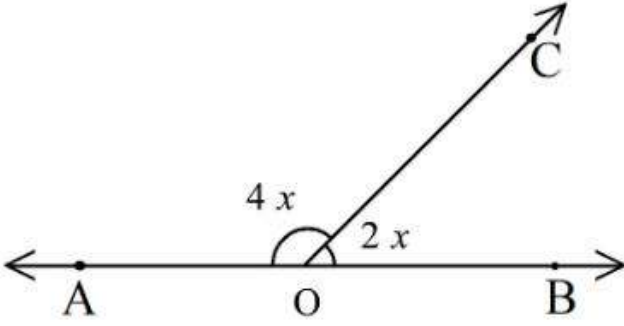
Question Number : 69 Question Id : 48558436704 Question Type : MCQ Option Shuffling : No Is Question Mandatory : No Calculator : None Response Time : N.A Think Time : N.A Minimum Instruction Time : 0

Correct Marks : 5 Wrong Marks : 1

Question Key Details :

Key	Value
Comprehension	MCQ

ಚಿತ್ರದಲ್ಲಿ $\angle AOC$ ಮತ್ತು $\angle BOC$ ಗಳು ಒಂದು ರೇಖಾ ಜೋಡಿಯನ್ನು ರಚಿಸುತ್ತವೆ. x ನ ಮೌಲ್ಯವು:



1. 30°
2. 25°
3. 40°
4. 15°

Options :

485584146813. 1
 485584146814. 2
 485584146815. 3
 485584146816. 4

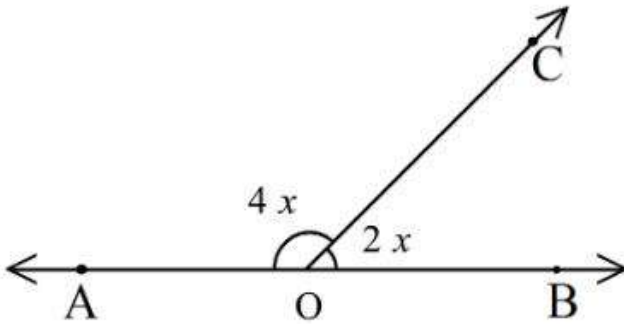
Question Number : 69 Question Id : 48558436704 Question Type : MCQ Option Shuffling : No Is Question Mandatory : No Calculator : None Response Time : N.A Think Time : N.A Minimum Instruction Time : 0

Correct Marks : 5 Wrong Marks : 1

Question Key Details :

Key	Value
Comprehension	MCQ

ಒಂದು ರೇಖಾ ಜೋಡಿಯನ್ನು ರಚಿಸುತ್ತಿರುವ $\angle AOC$ ಮತ್ತು $\angle BOC$ ಯು $4x$ ಮತ್ತು $2x$ ಆಗಿರುತ್ತವೆ. x ನ ಮೌಲ್ಯವನ್ನು ಕಂಡುಹಿಡಿಯಿರಿ.



1. 30°
2. 25°
3. 40°
4. 15°

Options :

- 485584146813. 1
- 485584146814. 2
- 485584146815. 3
- 485584146816. 4

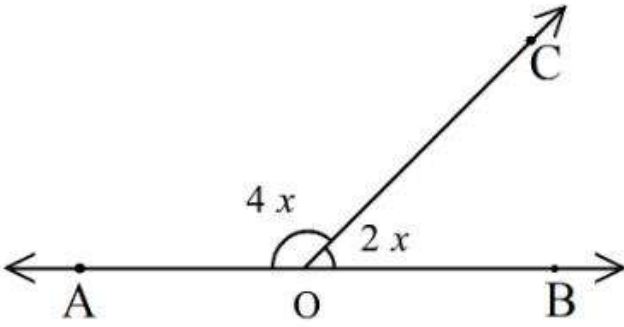
Question Number : 69 Question Id : 48558436704 Question Type : MCQ Option Shuffling : No Is Question Mandatory : No Calculator : None Response Time : N.A Think Time : N.A Minimum Instruction Time : 0

Correct Marks : 5 Wrong Marks : 1

Question Key Details :

Key	Value
Comprehension	MCQ

आकृतीमधील $\angle AOC$ आणि $\angle BOC$ या रेषीय कोनांची जोडी तयार करतात. तर x ची किंमत-



- 1. 30°
- 2. 25°
- 3. 40°
- 4. 15°

Options :

- 485584146813. 1
- 485584146814. 2
- 485584146815. 3
- 485584146816. 4

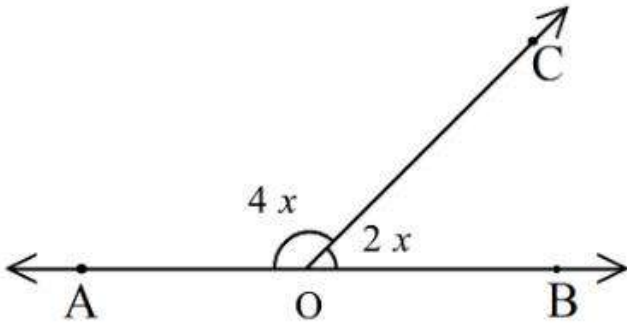
Question Number : 69 Question Id : 48558436704 Question Type : MCQ Option Shuffling : No Is Question Mandatory : No Calculator : None Response Time : N.A Think Time : N.A Minimum Instruction Time : 0

Correct Marks : 5 Wrong Marks : 1

Question Key Details :

Key	Value
Comprehension	MCQ

ନିମ୍ନ ଚିତ୍ରରେ, $\angle AOC$ ଏବଂ $\angle BOC$ ଗୋଟିଏ ସମରେଖା ସ୍ଥିରକ ଗଠନ କରନ୍ତି (form a linear pair) । ତାହାହେଲେ x ର ମୂଲ୍ୟ କେତେ ହେବ?



1. 30°
2. 25°
3. 40°
4. 15°

Options :

485584146813. 1
485584146814. 2
485584146815. 3
485584146816. 4

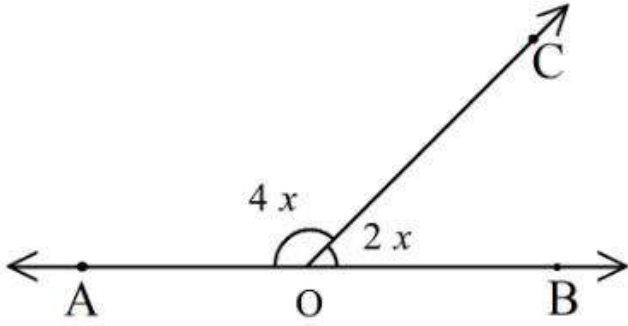
Question Number : 69 Question Id : 48558436704 Question Type : MCQ Option Shuffling : No Is Question Mandatory : No Calculator : None Response Time : N.A Think Time : N.A Minimum Instruction Time : 0

Correct Marks : 5 Wrong Marks : 1

Question Key Details :

Key	Value
Comprehension	MCQ

ਚਿੱਤਰ ਵਿੱਚ $\angle AOC$ ਅਤੇ $\angle BOC$ ਇੱਕ ਰੇਖਿਕ ਜੋੜ ਬਣਾਉਂਦੇ ਹਨ। x ਦਾ ਮੁੱਲ ਹੈ ?



1. 30°
2. 25°
3. 40°
4. 15°

Options :

485584146813. 1
485584146814. 2
485584146815. 3
485584146816. 4

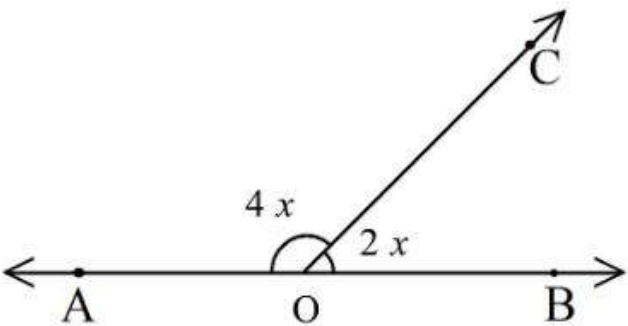
Question Number : 69 Question Id : 48558436704 Question Type : MCQ Option Shuffling : No Is Question Mandatory : No Calculator : None Response Time : N.A Think Time : N.A Minimum Instruction Time : 0

Correct Marks : 5 Wrong Marks : 1

Question Key Details :

Key	Value
Comprehension	MCQ

ਪਲੱਟੀਲ, $\angle AOC$ ਮਠ੍ਰਠੁਮ $\angle BOC$ ਂਠਪਵੇ ਓਰੁ ਨੇਰੀਯਲ਼ ਈਠੈਠਯੇ ਁਰੁਵਾਕੁਕੁਰੁਠੁ ਂਠੀਲ਼, x -ਈਠ ਮਠੀਪਪੈਕ ਕਾਠਠਕ.



1. 30°
2. 25°
3. 40°
4. 15°

Options :

- 485584146813. 1
- 485584146814. 2
- 485584146815. 3
- 485584146816. 4

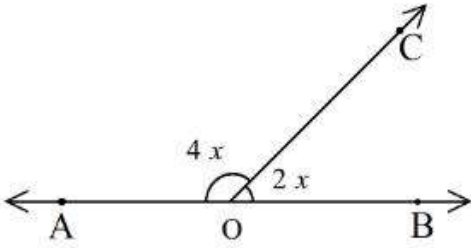
Question Number : 69 Question Id : 48558436704 Question Type : MCQ Option Shuffling : No Is Question Mandatory : No Calculator : None Response Time : N.A Think Time : N.A Minimum Instruction Time : 0

Correct Marks : 5 Wrong Marks : 1

Question Key Details :

Key	Value
Comprehension	MCQ

క్రింది పటంలో, $\angle AOC$ మరియు $\angle BOC$ ఒక సరళ జతను ఏర్పరుస్తాయి. x విలువ:



- 1. 30°
- 2. 25°
- 3. 40°
- 4. 15°

Options :

- 485584146813. 1
- 485584146814. 2
- 485584146815. 3
- 485584146816. 4

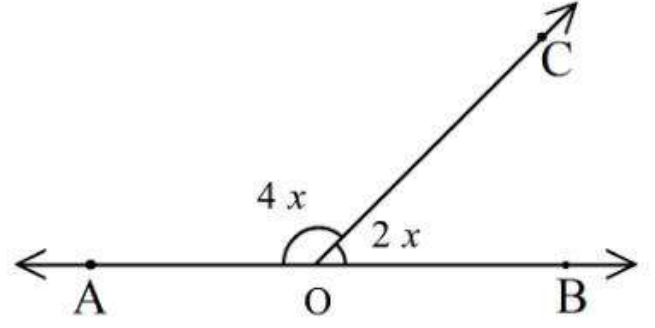
Question Number : 69 Question Id : 48558436704 Question Type : MCQ Option Shuffling : No Is Question Mandatory : No Calculator : None Response Time : N.A Think Time : N.A Minimum Instruction Time : 0

Correct Marks : 5 Wrong Marks : 1

Question Key Details :

Key	Value
Comprehension	MCQ

اس شکل میں، $\triangle AOC$ اور $\triangle BOC$ ایک طولی جوڑا بناتے ہیں۔ اس میں x کی قدر نکالیں؟



1. 30°

2. 25°

3. 40°

4. 15°

Options :

485584146813. 1

485584146814. 2

485584146815. 3

485584146816. 4

Question Number : 70 Question Id : 48558436705 Question Type : MCQ Option Shuffling : No Is Question Mandatory : No Calculator : None Response Time : N.A Think Time : N.A Minimum Instruction Time : 0

Correct Marks : 5 Wrong Marks : 1

Question Key Details :

Key	Value
Comprehension	MCQ

How many terms are there in the G.P.

3, 6, 12, 24,....., 384 ?

1. 8

2. 9

3. 10

4. 11

Options :

485584146817. 1

485584146818. 2

485584146819. 3

485584146820. 4

Question Number : 70 Question Id : 48558436705 Question Type : MCQ Option Shuffling : No Is Question Mandatory :

No Calculator : None Response Time : N.A Think Time : N.A Minimum Instruction Time : 0

Correct Marks : 5 Wrong Marks : 1

Question Key Details :

Key	Value
Comprehension	MCQ

गुणोत्तर श्रेणी 3, 6, 12, 24,....., 384 में कितने पद हैं?

1. 8

2. 9

3. 10

4. 11

Options :

485584146817. 1

485584146818. 2

485584146819. 3

485584146820. 4

Question Number : 70 Question Id : 48558436705 Question Type : MCQ Option Shuffling : No Is Question Mandatory :

No Calculator : None Response Time : N.A Think Time : N.A Minimum Instruction Time : 0

Correct Marks : 5 Wrong Marks : 1

Question Key Details :

Key	Value
Comprehension	MCQ

এই গুণোত্তর প্রগতিটোত (G.P.) কিমানটা পদ আছে?

3, 6, 12, 24,....., 384 ?

1. 8

2. 9

3. 10

4. 11

Options :

485584146817. 1

485584146818. 2

485584146819. 3

485584146820. 4

Question Number : 70 Question Id : 48558436705 Question Type : MCQ Option Shuffling : No Is Question Mandatory :

No Calculator : None Response Time : N.A Think Time : N.A Minimum Instruction Time : 0

Correct Marks : 5 Wrong Marks : 1

Question Key Details :

Key	Value
Comprehension	MCQ

নিচের গুণকতর প্রগতিতে কতগুলি সংখ্যা আছে ?

3, 6, 12, 24,....., 384 ?

1. 8

2. 9

3. 10

4. 11

Options :

485584146817. 1

485584146818. 2

485584146819. 3

485584146820. 4

Question Number : 70 Question Id : 48558436705 Question Type : MCQ Option Shuffling : No Is Question Mandatory : No Calculator : None Response Time : N.A Think Time : N.A Minimum Instruction Time : 0

Correct Marks : 5 Wrong Marks : 1

Question Key Details :

Key	Value
Comprehension	MCQ

G. P. মঁ ঙটলা ৭৬ ঐ তে শীঘী.

3, 6, 12, 24,....., 384 ?

1. 8

2. 9

3. 10

4. 11

Options :

485584146817. 1

485584146818. 2

485584146819. 3

485584146820. 4

Question Number : 70 Question Id : 48558436705 Question Type : MCQ Option Shuffling : No Is Question Mandatory : No Calculator : None Response Time : N.A Think Time : N.A Minimum Instruction Time : 0

Correct Marks : 5 Wrong Marks : 1

Question Key Details :

Key	Value
Comprehension	MCQ

G.P. ಯಲ್ಲಿ ಎಷ್ಟು ಪದಗಳಿವೆ?

3, 6, 12, 24,....., 384 ?

1. 8

2. 9

3. 10

4. 11

Options :

485584146817. 1

485584146818. 2

485584146819. 3

485584146820. 4

Question Number : 70 Question Id : 48558436705 Question Type : MCQ Option Shuffling : No Is Question Mandatory : No Calculator : None Response Time : N.A Think Time : N.A Minimum Instruction Time : 0

Correct Marks : 5 Wrong Marks : 1

Question Key Details :

Key	Value
Comprehension	MCQ

ചുവടെ തന്നിട്ടുള്ള (G.P) യിൽ എത്ര പദങ്ങൾ ഉണ്ട് ?

3, 6, 12, 24,....., 384

1. 8

2. 9

3. 10

4. 11

Options :

485584146817. 1

485584146818. 2

485584146819. 3

485584146820. 4

Question Number : 70 Question Id : 48558436705 Question Type : MCQ Option Shuffling : No Is Question Mandatory : No Calculator : None Response Time : N.A Think Time : N.A Minimum Instruction Time : 0

Correct Marks : 5 Wrong Marks : 1

Question Key Details :

Key	Value
Comprehension	MCQ

ପୁଢ଼ିଲ ଭୂମିତୀୟ ଶ୍ରେଣୀମଧ୍ୟେ (G.P.) କିତୀ ପଦେ ଆହେତ?

3, 6, 12, 24,....., 384 ?

1. 8

2. 9

3. 10

4. 11

Options :

485584146817. 1

485584146818. 2

485584146819. 3

485584146820. 4

Question Number : 70 Question Id : 48558436705 Question Type : MCQ Option Shuffling : No Is Question Mandatory : No Calculator : None Response Time : N.A Think Time : N.A Minimum Instruction Time : 0

Correct Marks : 5 Wrong Marks : 1

Question Key Details :

Key	Value
Comprehension	MCQ

ଗୁଣୋତ୍ତର ପ୍ରଗତି (G.P.) ରେ କେତେଟି ପଦ (terms) ଅଛନ୍ତି?

3, 6, 12, 24,....., 384 ?

1. 8

2. 9

3. 10

4. 11

Options :

485584146817. 1

485584146818. 2

485584146819. 3

485584146820. 4

Question Number : 70 Question Id : 48558436705 Question Type : MCQ Option Shuffling : No Is Question Mandatory : No Calculator : None Response Time : N.A Think Time : N.A Minimum Instruction Time : 0

Correct Marks : 5 Wrong Marks : 1

Question Key Details :

Key	Value
Comprehension	MCQ

G.P. ਵਿੱਚ ਕਿੰਨੇ ਪਦ ਹੋ ਸਕਦੇ ਹਨ ?

3, 6, 12, 24,....., 384 ?

1. 8

2. 9

3. 10

4. 11

Options :

485584146817. 1

485584146818. 2

485584146819. 3

485584146820. 4

Question Number : 70 Question Id : 48558436705 Question Type : MCQ Option Shuffling : No Is Question Mandatory : No Calculator : None Response Time : N.A Think Time : N.A Minimum Instruction Time : 0

Correct Marks : 5 Wrong Marks : 1

Question Key Details :

Key	Value
Comprehension	MCQ

ਕੀਮਤ ਕੋਆਠੁਕਕਪਪਡੁਠੁਠੁਠੁ G.P ਠੋਠਾਡਰੀਲੁ ਠੁਠੁਠੁ ਠੁਠੁਪੁਕਗੀਨੁ ਠੁਠੁਠੁਠੁਕਕਠੁਠੁਕਠੁਠੁਕ ਕਾਠੁਠੁਕ.

3, 6, 12, 24,....., 384 ?

1. 8

2. 9

3. 10

4. 11

Options :

485584146817. 1

485584146818. 2

485584146819. 3

485584146820. 4

Question Number : 70 Question Id : 48558436705 Question Type : MCQ Option Shuffling : No Is Question Mandatory : No Calculator : None Response Time : N.A Think Time : N.A Minimum Instruction Time : 0

Correct Marks : 5 Wrong Marks : 1

Question Key Details :

Key	Value
Comprehension	MCQ

3, 6, 12, 24,....., 384 G.P. లో ఎన్ని పదాలు ఉన్నాయి?

1. 8

2. 9

3. 10

4. 11

Options :

485584146817. 1

485584146818. 2

485584146819. 3

485584146820. 4

Question Number : 70 Question Id : 48558436705 Question Type : MCQ Option Shuffling : No Is Question Mandatory : No Calculator : None Response Time : N.A Think Time : N.A Minimum Instruction Time : 0

Correct Marks : 5 Wrong Marks : 1

Question Key Details :

Key	Value
Comprehension	MCQ

اس G.P میں کتنی 'terms' ہیں ؟

3, 6, 12, 24,....., 384 ?

1. 8

2. 9

3. 10

4. 11

Options :

485584146817. 1

485584146818. 2

485584146819. 3

485584146820. 4

Question Number : 71 Question Id : 48558436706 Question Type : MCQ Option Shuffling : No Is Question Mandatory : No Calculator : None Response Time : N.A Think Time : N.A Minimum Instruction Time : 0

Correct Marks : 5 Wrong Marks : 1

Question Key Details :

Key	Value
Comprehension	MCQ

'Satyameva Jayate' in the National emblem has been taken from :

1. Gita
2. Kathopnishad
3. Mundaka Upanishad
4. Nyaya Darshana

Options :

485584146821. 1
485584146822. 2
485584146823. 3
485584146824. 4

Question Number : 71 Question Id : 48558436706 Question Type : MCQ Option Shuffling : No Is Question Mandatory : No Calculator : None Response Time : N.A Think Time : N.A Minimum Instruction Time : 0

Correct Marks : 5 Wrong Marks : 1

Question Key Details :

Key	Value
Comprehension	MCQ

राष्ट्रीय प्रतीक में 'सत्यमेव जयते' निम्न में से किससे लिया गया है:

1. गीता
2. कठोपनिषद
3. मूँडक उपनिषद
4. न्याय दर्शन

Options :

485584146821. 1
485584146822. 2
485584146823. 3
485584146824. 4

Question Number : 71 Question Id : 48558436706 Question Type : MCQ Option Shuffling : No Is Question Mandatory : No Calculator : None Response Time : N.A Think Time : N.A Minimum Instruction Time : 0

Correct Marks : 5 Wrong Marks : 1

Question Key Details :

Key	Value
Comprehension	MCQ

ৰাষ্ট্ৰীয় প্ৰতীকিত লিপিবদ্ধ 'সত্যমেব জয়তে' লোৱা হৈছে:

1. গীতাৰ পৰা
2. কথা উপনিষদৰ পৰা
3. মুণ্ডক উপনিষদৰ পৰা
4. ন্যায় দৰ্শনৰ পৰা

Options :

485584146821. 1
485584146822. 2
485584146823. 3
485584146824. 4

Question Number : 71 Question Id : 48558436706 Question Type : MCQ Option Shuffling : No Is Question Mandatory : No Calculator : None Response Time : N.A Think Time : N.A Minimum Instruction Time : 0

Correct Marks : 5 Wrong Marks : 1

Question Key Details :

Key	Value
Comprehension	MCQ

জাতীয় প্ৰতীকে থাকা 'সত্যমেব জয়তে' কাৰ থেকে নেওয়া হয়েছে:

1. গীতা
2. কঠোপনিষদ
3. মুণ্ডক উপনিষদ
4. ন্যায় দৰ্শন

Options :

485584146821. 1
485584146822. 2
485584146823. 3
485584146824. 4

Question Number : 71 Question Id : 48558436706 Question Type : MCQ Option Shuffling : No Is Question Mandatory : No Calculator : None Response Time : N.A Think Time : N.A Minimum Instruction Time : 0

Correct Marks : 5 Wrong Marks : 1

Question Key Details :

Key	Value
Comprehension	MCQ

રાજચિહ્નમાં આવેલ 'સત્યમેવ જયતે' ક્યાંથી લેવામાં આવેલ છે ?

1. ગીતા
2. કઠોપનિષદ
3. મુંડક ઉપનિષદ
4. ન્યાય દર્શન

Options :

485584146821. 1
485584146822. 2
485584146823. 3
485584146824. 4

Question Number : 71 Question Id : 48558436706 Question Type : MCQ Option Shuffling : No Is Question Mandatory : No Calculator : None Response Time : N.A Think Time : N.A Minimum Instruction Time : 0

Correct Marks : 5 Wrong Marks : 1

Question Key Details :

Key	Value
Comprehension	MCQ

રાષ્ટ્ર લાંબાનદર્ભીરુવ 'સત્યમેવ જયતે'યનુ પડેદીરુવુદુ ઇદરિંદ:

1. ગેતે
2. કરોપનિષદ
3. મુંડક ઉપનિષદ
4. ન્યાયદર્શન

Options :

485584146821. 1
485584146822. 2
485584146823. 3
485584146824. 4

Question Number : 71 Question Id : 48558436706 Question Type : MCQ Option Shuffling : No Is Question Mandatory : No Calculator : None Response Time : N.A Think Time : N.A Minimum Instruction Time : 0

Correct Marks : 5 Wrong Marks : 1

Question Key Details :

Key	Value
Comprehension	MCQ

"സത്യമേവ ജയതേ" എന്നത് എവിടെ നിന്ന് എടുത്തതാണ്

1. ഗീത
2. കഥോപനിഷദ്
3. മുണ്ടക ഉപനിഷദ്
4. ന്യായ ദർശന

Options :

485584146821. 1
485584146822. 2
485584146823. 3
485584146824. 4

Question Number : 71 Question Id : 48558436706 Question Type : MCQ Option Shuffling : No Is Question Mandatory : No Calculator : None Response Time : N.A Think Time : N.A Minimum Instruction Time : 0

Correct Marks : 5 Wrong Marks : 1

Question Key Details :

Key	Value
Comprehension	MCQ

आपल्या देशाच्या राजमुद्रेतील 'सत्यमेव जयते' हे विधान _____ तून घेतले आहे.

1. गीता
2. कठोपनिषद
3. मंडुक उपनिषद
4. न्याय दर्शन

Options :

485584146821. 1
485584146822. 2
485584146823. 3
485584146824. 4

Question Number : 71 Question Id : 48558436706 Question Type : MCQ Option Shuffling : No Is Question Mandatory : No Calculator : None Response Time : N.A Think Time : N.A Minimum Instruction Time : 0

Correct Marks : 5 Wrong Marks : 1

Question Key Details :

Key	Value
Comprehension	MCQ

ରାଷ୍ଟ୍ରୀୟ ପ୍ରତୀକ (state emblem) ରେ "ସତ୍ୟମେବ ଜୟତେ" କେଉଁଠୁ ଆଣା ହୋଇଛି?

1. ଗୀତା
2. କଥାପତ୍ରିକା
3. ମୁଦ୍ରା ଉପତ୍ରିକା
4. ନ୍ୟାୟ ଦର୍ଶନ

Options :

485584146821. 1
485584146822. 2
485584146823. 3
485584146824. 4

Question Number : 71 Question Id : 48558436706 Question Type : MCQ Option Shuffling : No Is Question Mandatory : No Calculator : None Response Time : N.A Think Time : N.A Minimum Instruction Time : 0

Correct Marks : 5 Wrong Marks : 1

Question Key Details :

Key	Value
Comprehension	MCQ

ਰਾਜ ਚਿੰਨ੍ਹ ਵਿੱਚ " ਸਤਯਮੇਵ ਜਯਤੇ " ਤੋਂ ਲਿਆ ਗਿਆ ਹੈ?

1. ਗੀਤਾ
2. ਕਠੋਪਨਿਸ਼ਦ
3. ਮੁੰਡਕਾ ਉਪਨਿਸ਼ਦ
4. ਨਿਆਇੰ ਦਰਸ਼ਨ

Options :

485584146821. 1
485584146822. 2
485584146823. 3
485584146824. 4

Question Number : 71 Question Id : 48558436706 Question Type : MCQ Option Shuffling : No Is Question Mandatory : No Calculator : None Response Time : N.A Think Time : N.A Minimum Instruction Time : 0

Correct Marks : 5 Wrong Marks : 1

Question Key Details :

Key	Value
Comprehension	MCQ

'శత్యమేవ జయతే (Satyameva Jayate)' యనఱ డేసీయ ముఱుక్కమ్ ఇతిలిరుఱుతు ఁఢుక్కప్పఢుఢుతు :

1. కీఢేత
2. కఢేతఱపఢిషుఢు
3. ముఢుఢుఢుక ఁపఢిషుఢు
4. ఱీయఱయ తఱఱుఢుఢుఱ

Options :

485584146821. 1
485584146822. 2
485584146823. 3
485584146824. 4

Question Number : 71 Question Id : 48558436706 Question Type : MCQ Option Shuffling : No Is Question Mandatory : No Calculator : None Response Time : N.A Think Time : N.A Minimum Instruction Time : 0

Correct Marks : 5 Wrong Marks : 1

Question Key Details :

Key	Value
Comprehension	MCQ

జఱఱీయ చిహ్ఱం లీఢి 'సత్యమేవ జయతే' ఢీఢి నుఢుఢి ఱీసుకొనబఢిఢుఢి :

1. గీత
2. కఱఱీపఢిషుఢు
3. ముఢుఢుఢుక ఁపఢిషుఢు
4. న్యఱయ ఢఱఱుఢు

Options :

485584146821. 1
485584146822. 2
485584146823. 3
485584146824. 4

Question Number : 71 Question Id : 48558436706 Question Type : MCQ Option Shuffling : No Is Question Mandatory : No Calculator : None Response Time : N.A Think Time : N.A Minimum Instruction Time : 0

Correct Marks : 5 Wrong Marks : 1

Question Key Details :

Key	Value
Comprehension	MCQ

ہمارے قومی ایبلم میں کنندہ 'ستیا میٹو جیائے' کہاں سے لیا گیا ہے؟

1. گیتا
2. کتھوپ نشاد
3. منڈا کا اپاناشاد
4. نیانے درشن

Options :

485584146821. 1
485584146822. 2
485584146823. 3
485584146824. 4

Question Number : 72 Question Id : 48558436707 Question Type : MCQ Option Shuffling : No Is Question Mandatory : No Calculator : None Response Time : N.A Think Time : N.A Minimum Instruction Time : 0

Correct Marks : 5 Wrong Marks : 1

Question Key Details :

Key	Value
Comprehension	MCQ

The National Emblem adopted by India shows :

1. Three lions, a bull and a galloping horse.
2. Three lions, an elephant and a bull.
3. Three lions, an elephant and a galloping horse.
4. Four lions, an elephant and a galloping horse.

Options :

485584146825. 1
485584146826. 2
485584146827. 3
485584146828. 4

Question Number : 72 Question Id : 48558436707 Question Type : MCQ Option Shuffling : No Is Question Mandatory : No Calculator : None Response Time : N.A Think Time : N.A Minimum Instruction Time : 0

Correct Marks : 5 Wrong Marks : 1

Question Key Details :

Key	Value
Comprehension	MCQ

भारत का राष्ट्रीय प्रतीक दर्शाता है:

1. तीन शेर, एक साँड तथा एक दौड़ता हुआ घोड़ा।
2. तीन शेर, एक हाथी तथा एक साँड।
3. तीन शेर, एक हाथी तथा एक दौड़ता हुआ घोड़ा।
4. चार शेर, एक हाथी तथा एक दौड़ता हुआ घोड़ा।

Options :

485584146825. 1
485584146826. 2
485584146827. 3
485584146828. 4

Question Number : 72 Question Id : 48558436707 Question Type : MCQ Option Shuffling : No Is Question Mandatory : No Calculator : None Response Time : N.A Think Time : N.A Minimum Instruction Time : 0

Correct Marks : 5 Wrong Marks : 1

Question Key Details :

Key	Value
Comprehension	MCQ

ভাৰতৰ ৰাষ্ট্ৰীয় প্ৰতীক চিহ্নত দেখা পোৱা যায়:

1. তিনিটা সিংহ, এটা বলধ আৰু এটা চেকুৰি থকা ঘোঁৰা
2. তিনিটা সিংহ, এটা হাতী আৰু এটা বলধ
3. তিনিটা সিংহ, এটা হাতী আৰু এটা চেকুৰি থকা ঘোঁৰা
4. চাৰিটা সিংহ, এটা হাতী আৰু এটা চেকুৰি থকা সিংহ

Options :

485584146825. 1
485584146826. 2
485584146827. 3
485584146828. 4

Question Number : 72 Question Id : 48558436707 Question Type : MCQ Option Shuffling : No Is Question Mandatory : No Calculator : None Response Time : N.A Think Time : N.A Minimum Instruction Time : 0

Correct Marks : 5 Wrong Marks : 1

Question Key Details :

Key	Value
Comprehension	MCQ

ભારતેર જાતીય પ્રતીકે રયેલ્લે:

1. તિનટિ સિંહ, ઁકટિ ષાંડ ઁવં ઁકટિ દોડે આસા ષોડા
2. તિનટિ સિંહ, ઁકટિ હાતિ ઁવં ઁકટિ ષાંડ
3. તિનટિ સિંહ, ઁકટિ હાતિ ઁવં ઁકટિ દોડે આસા ષોડા।
4. ઁરઁટિ આયન, ઁકટિ હાતિ ઁવં ઁકટિ દોડે આસા ષોડા

Options :

485584146825. 1
485584146826. 2
485584146827. 3
485584146828. 4

Question Number : 72 Question Id : 48558436707 Question Type : MCQ Option Shuffling : No Is Question Mandatory : No Calculator : None Response Time : N.A Think Time : N.A Minimum Instruction Time : 0

Correct Marks : 5 Wrong Marks : 1

Question Key Details :

Key	Value
Comprehension	MCQ

ભારત દ્વારા સિવકારવામાં આવેલ રાજચિહ્ન શું દર્શાવે છે ?

1. ત્રણ સિંહ, ઁક બળદ અને ઁક દોડતો ઘોડો
2. ત્રણ સિંહ, ઁક હાથી અને ઁક બળદ
3. ત્રણ સિંહ, ઁક હાથી અને ઁક દોડતો ઘોડો
4. ચાર સિંહ, ઁક હાથી અને ઁક દોડતો ઘોડો

Options :

485584146825. 1
485584146826. 2
485584146827. 3
485584146828. 4

Question Number : 72 Question Id : 48558436707 Question Type : MCQ Option Shuffling : No Is Question Mandatory : No Calculator : None Response Time : N.A Think Time : N.A Minimum Instruction Time : 0

Correct Marks : 5 Wrong Marks : 1

Question Key Details :

Key	Value
Comprehension	MCQ

ಭಾರತ ಅಳವಡಿಸಿಕೊಂಡಿರುವ ರಷ್ಯಾ ಲಾಂಛನ ತೋರಿಸುವುದು:

1. ಮೂರು ಸಿಂಹಗಳು, ಎತ್ತು ಮತ್ತು ಒಂದು ನಾಗಾಲೋಟದ ಕುದುರೆ
2. ಮೂರು ಸಿಂಹಗಳು, ಒಂದು ಆನೆ ಮತ್ತು ಒಂದು ಎತ್ತು
3. ಮೂರು ಸಿಂಹಗಳು, ಒಂದು ಆನೆ ಮತ್ತು ಒಂದು ನಾಗಾಲೋಟದ ಕುದುರೆ
4. ನಾಲ್ಕು ಸಿಂಹಗಳು, ಒಂದು ಆನೆ ಮತ್ತು ಒಂದು ನಾಗಾಲೋಟದ ಕುದುರೆ

Options :

485584146825. 1
485584146826. 2
485584146827. 3
485584146828. 4

Question Number : 72 Question Id : 48558436707 Question Type : MCQ Option Shuffling : No Is Question Mandatory : No Calculator : None Response Time : N.A Think Time : N.A Minimum Instruction Time : 0

Correct Marks : 5 Wrong Marks : 1

Question Key Details :

Key	Value
Comprehension	MCQ

ಛಾತ್ರಾಧಿಕಾರಿಗಳಿಗೆ ಅನುಕೂಲವಾಗಿರುವುದು

1. 3 ಸಿಂಹಗಳು , ಒಂದು ಆನೆ , ಒಂದು ಕುದುರೆ
2. 3 ಸಿಂಹಗಳು , ಒಂದು ಆನೆ , ಒಂದು ಎತ್ತು
3. 3 ಸಿಂಹಗಳು , ಒಂದು ಆನೆ , ಒಂದು ಕುದುರೆ
4. 4 ಸಿಂಹಗಳು , ಒಂದು ಆನೆ , ಒಂದು ಕುದುರೆ

Options :

485584146825. 1
485584146826. 2
485584146827. 3
485584146828. 4

Question Number : 72 Question Id : 48558436707 Question Type : MCQ Option Shuffling : No Is Question Mandatory : No Calculator : None Response Time : N.A Think Time : N.A Minimum Instruction Time : 0

Correct Marks : 5 Wrong Marks : 1

Question Key Details :

Key	Value
Comprehension	MCQ

भारताने स्वीकारलेली राजमुद्रा -

1. तीन सिंह, एक बैल आणि वेगाने धावणारा घोडा
2. तीन सिंह, हत्ती आणि एक बैल
3. तीन सिंह, हत्ती आअणि वेगाने धावणारा घोडा
4. चार सिंह, हत्ती आणि वेगाने धावणारा घोडा

Options :

485584146825. 1
485584146826. 2
485584146827. 3
485584146828. 4

Question Number : 72 Question Id : 48558436707 Question Type : MCQ Option Shuffling : No Is Question Mandatory : No Calculator : None Response Time : N.A Think Time : N.A Minimum Instruction Time : 0

Correct Marks : 5 Wrong Marks : 1

Question Key Details :

Key	Value
Comprehension	MCQ

ଭାରତ ବର୍ଷରେ ଗୃହିତ ହୋଇଥିବା ରାଷ୍ଟ୍ରୀୟ ପ୍ରତୀକ କଣ ଦର୍ଶାଏ?

1. ତିନୋଟି ସିଂହ, ଗୋଟିଏ ଶରୀ ଏବଂ ଗୋଟିଏ ଦ୍ରୁତ ଗତିରେ ଧାଉଁଥିବା ଘୋଡ଼ା
2. ତିନୋଟି ସିଂହ, ଗୋଟିଏ ହାତୀ ଏବଂ ଗୋଟିଏ ଶରୀ
3. ତିନୋଟି ସିଂହ, ଗୋଟିଏ ହାତୀ ଏବଂ ଗୋଟିଏ ଦ୍ରୁତ ଗତିରେ ଧାଉଁଥିବା ଘୋଡ଼ା
4. ଚାରୋଟି ସିଂହ, ଗୋଟିଏ ହାତୀ ଏବଂ ଗୋଟିଏ ଦ୍ରୁତ ଗତିରେ ଧାଉଁଥିବା ଘୋଡ଼ା

Options :

485584146825. 1
485584146826. 2
485584146827. 3
485584146828. 4

Question Number : 72 Question Id : 48558436707 Question Type : MCQ Option Shuffling : No Is Question Mandatory : No Calculator : None Response Time : N.A Think Time : N.A Minimum Instruction Time : 0

Correct Marks : 5 Wrong Marks : 1

Question Key Details :

Key	Value
Comprehension	MCQ

ਭਾਰਤ ਦੁਆਰਾ ਅਪਣਾਇਆ ਗਿਆ ਰਾਜ ਚਿੰਨ੍ਹ ਦਰਸਾਉਂਦਾ ਹੈ?

1. ਤਿੰਨ ਸ਼ੇਰ, ਇੱਕ ਬਲਦ ਅਤੇ ਇੱਕ ਦੌੜਦਾ ਘੋੜਾ
2. ਤਿੰਨ ਸ਼ੇਰ, ਇੱਕ ਹਾਥੀ ਅਤੇ ਇੱਕ ਬਲਦ
3. ਤਿੰਨ ਸ਼ੇਰ, ਇੱਕ ਹਾਥੀ ਅਤੇ ਇੱਕ ਦੌੜਦਾ ਘੋੜਾ
4. ਚਾਰ ਸ਼ੇਰ, ਹਾਥੀ ਅਤੇ ਇੱਕ ਦੌੜਦਾ ਘੋੜਾ

Options :

485584146825. 1
485584146826. 2
485584146827. 3
485584146828. 4

Question Number : 72 Question Id : 48558436707 Question Type : MCQ Option Shuffling : No Is Question Mandatory : No Calculator : None Response Time : N.A Think Time : N.A Minimum Instruction Time : 0

Correct Marks : 5 Wrong Marks : 1

Question Key Details :

Key	Value
Comprehension	MCQ

இந்தியாவால் ஏற்றுக்கொள்ளப்பட்ட தேசிய சின்னம் இதைக் குறிக்கிறது:

1. மூன்று அயன்கள், ஒரு காளை மற்றும் ஒரு குதிரை.
2. மூன்று அயன்கள், ஒரு யானை மற்றும் ஒரு காளை.
3. மூன்று அயன்கள், ஒரு யானை மற்றும் ஒரு குதிரை.
4. நான்கு அயன்கள், ஒரு யானை மற்றும் ஒரு குதிரை.

Options :

485584146825. 1
485584146826. 2
485584146827. 3
485584146828. 4

Question Number : 72 Question Id : 48558436707 Question Type : MCQ Option Shuffling : No Is Question Mandatory : No Calculator : None Response Time : N.A Think Time : N.A Minimum Instruction Time : 0

Correct Marks : 5 Wrong Marks : 1

Question Key Details :

Key	Value
Comprehension	MCQ

భారతదేశం స్వీకరించిన జాతీయ చిహ్నం దేనిని చూపిస్తుంది::

1. మూడు సింహాలు, ఒక ఎద్దు మరియు ఒక పరిగెత్తు గుర్రం
2. మూడు సింహాలు, ఒక ఏనుగు మరియు ఒక ఎద్దు
3. మూడు సింహాలు, ఏనుగు మరియు ఒక పరిగెత్తు గుర్రం
4. నాలుగు సింహాలు, ఏనుగు మరియు ఒక పరిగెత్తు గుర్రం

Options :

485584146825. 1
485584146826. 2
485584146827. 3
485584146828. 4

Question Number : 72 Question Id : 48558436707 Question Type : MCQ Option Shuffling : No Is Question Mandatory : No Calculator : None Response Time : N.A Think Time : N.A Minimum Instruction Time : 0

Correct Marks : 5 Wrong Marks : 1

Question Key Details :

Key	Value
Comprehension	MCQ

ہندوستان کا 'State Emblem' کیا دکھاتا ہے ؟

1. تین شیر، ایک بیل اور ایک کودتا ہوا گھوڑا
2. تین شیر، ایک ہاتھی اور ایک بیل
3. تین شیر، ایک ہاتھی اور ایک کودتا ہوا گھوڑا
4. چار شیر، ایک ہاتھی اور ایک اچھلتا ہوا گھوڑا

Options :

485584146825. 1
485584146826. 2
485584146827. 3
485584146828. 4

Question Number : 73 Question Id : 48558436708 Question Type : MCQ Option Shuffling : No Is Question Mandatory : No Calculator : None Response Time : N.A Think Time : N.A Minimum Instruction Time : 0

Correct Marks : 5 Wrong Marks : 1

Question Key Details :

Key	Value
Comprehension	MCQ

Which state merged in India in 1975 ?

1. Mizoram
2. Goa
3. Sikkim
4. Arunachal Pradesh

Options :

485584146829. 1
485584146830. 2
485584146831. 3
485584146832. 4

Question Number : 73 Question Id : 48558436708 Question Type : MCQ Option Shuffling : No Is Question Mandatory : No Calculator : None Response Time : N.A Think Time : N.A Minimum Instruction Time : 0

Correct Marks : 5 Wrong Marks : 1

Question Key Details :

Key	Value
Comprehension	MCQ

वर्ष 1975 में भारत में कौन सा राज्य मिलाया गया?

1. मीजोराम
2. गोआ
3. सिक्किम
4. अरुणाचल प्रदेश

Options :

485584146829. 1
485584146830. 2
485584146831. 3
485584146832. 4

Question Number : 73 Question Id : 48558436708 Question Type : MCQ Option Shuffling : No Is Question Mandatory : No Calculator : None Response Time : N.A Think Time : N.A Minimum Instruction Time : 0

Correct Marks : 5 Wrong Marks : 1

Question Key Details :

Key	Value
Comprehension	MCQ

1975 চনত ভাৰতবৰ্ষত সন্মিলিত হোৱা ৰাজ্য কোনখন?

1. মিজোৰাম
2. গোৱা
3. ছিক্কিম
4. অৰুণাচল প্ৰদেশ

Options :

485584146829. 1
485584146830. 2
485584146831. 3
485584146832. 4

Question Number : 73 Question Id : 48558436708 Question Type : MCQ Option Shuffling : No Is Question Mandatory : No Calculator : None Response Time : N.A Think Time : N.A Minimum Instruction Time : 0

Correct Marks : 5 Wrong Marks : 1

Question Key Details :

Key	Value
Comprehension	MCQ

কোন ৰাজ্যটি 1975 সালে ভাৰতে বিলীন হৈছিল?

1. মিজোৰাম
2. গোয়া
3. সিক্কিম
4. অৰুণাচল প্ৰদেশ

Options :

485584146829. 1
485584146830. 2
485584146831. 3
485584146832. 4

Question Number : 73 Question Id : 48558436708 Question Type : MCQ Option Shuffling : No Is Question Mandatory : No Calculator : None Response Time : N.A Think Time : N.A Minimum Instruction Time : 0

Correct Marks : 5 Wrong Marks : 1

Question Key Details :

Key	Value
Comprehension	MCQ

1975 માં ક્યું રાજ્ય ભારતમાં વિલીન થયું ?

1. મિઝોરમ
2. ગોવા
3. સિક્કમ
4. અરુણાચલ પ્રદેશ

Options :

485584146829. 1
485584146830. 2
485584146831. 3
485584146832. 4

Question Number : 73 Question Id : 48558436708 Question Type : MCQ Option Shuffling : No Is Question Mandatory : No Calculator : None Response Time : N.A Think Time : N.A Minimum Instruction Time : 0

Correct Marks : 5 Wrong Marks : 1

Question Key Details :

Key	Value
Comprehension	MCQ

1975ರಲ್ಲಿ ಭારતದಲ್ಲಿ વિલીનગೊಂಡે રાજ્ય યાવુંદુ?

1. મિઝોરમ
2. ગોવા
3. સિક્કમ
4. અરુણાચલ પ્રદેશ

Options :

485584146829. 1
485584146830. 2
485584146831. 3
485584146832. 4

Question Number : 73 Question Id : 48558436708 Question Type : MCQ Option Shuffling : No Is Question Mandatory : No Calculator : None Response Time : N.A Think Time : N.A Minimum Instruction Time : 0

Correct Marks : 5 Wrong Marks : 1

Question Key Details :

Key	Value
Comprehension	MCQ

1975 ൽ ഭാരതത്തോട് ചേർന്ന സംസ്ഥാനം ഏത് ?

1. മിസോറാം
2. ഗോവ
3. സിക്കിം
4. അരുണാചൽ പ്രദേശ്

Options :

485584146829. 1
485584146830. 2
485584146831. 3
485584146832. 4

Question Number : 73 Question Id : 48558436708 Question Type : MCQ Option Shuffling : No Is Question Mandatory : No Calculator : None Response Time : N.A Think Time : N.A Minimum Instruction Time : 0

Correct Marks : 5 Wrong Marks : 1

Question Key Details :

Key	Value
Comprehension	MCQ

1975 मध्ये भारतात कोणते राज्य विलीन झाले?

1. मिझोरम
2. गोवा
3. सिक्किम
4. अरुणाचल प्रदेश

Options :

485584146829. 1
485584146830. 2
485584146831. 3
485584146832. 4

Question Number : 73 Question Id : 48558436708 Question Type : MCQ Option Shuffling : No Is Question Mandatory : No Calculator : None Response Time : N.A Think Time : N.A Minimum Instruction Time : 0

Correct Marks : 5 Wrong Marks : 1

Question Key Details :

Key	Value
Comprehension	MCQ

1975 ରେ ଭାରତ ସହିତ କେଉଁ ରାଜ୍ୟ ସମ୍ମିଳିତ ହେଲା?

1. ମିଜୋରାମ୍
2. ଗୋଆ
3. ସିକ୍କିମ୍
4. ଅରୁଣାଚଳ ପ୍ରଦେଶ

Options :

485584146829. 1
485584146830. 2
485584146831. 3
485584146832. 4

Question Number : 73 Question Id : 48558436708 Question Type : MCQ Option Shuffling : No Is Question Mandatory : No Calculator : None Response Time : N.A Think Time : N.A Minimum Instruction Time : 0

Correct Marks : 5 Wrong Marks : 1

Question Key Details :

Key	Value
Comprehension	MCQ

କିହଡ଼ା ରାଜ 1975 ਵਿੱਚ ଭାରତ ਵਿੱਚ ଲୀନ ହେ ଗିଆ?

1. ମିଜୋରମ
2. ଗୋଆ
3. ସିକ୍କିମ
4. ଅରୁଣାଚଳ ପ୍ରଦେଶ

Options :

485584146829. 1
485584146830. 2
485584146831. 3
485584146832. 4

Question Number : 73 Question Id : 48558436708 Question Type : MCQ Option Shuffling : No Is Question Mandatory : No Calculator : None Response Time : N.A Think Time : N.A Minimum Instruction Time : 0

Correct Marks : 5 Wrong Marks : 1

Question Key Details :

Key	Value
Comprehension	MCQ

1975 ஆம் ஆண்டில் இந்தியாவுடன் இணைந்த மாநிலம் எது?

1. மிசோரம்
2. கோவா
3. சிக்கிம்
4. அருணாச்சல பிரதேசம்

Options :

485584146829. 1
485584146830. 2
485584146831. 3
485584146832. 4

Question Number : 73 Question Id : 48558436708 Question Type : MCQ Option Shuffling : No Is Question Mandatory : No Calculator : None Response Time : N.A Think Time : N.A Minimum Instruction Time : 0

Correct Marks : 5 Wrong Marks : 1

Question Key Details :

Key	Value
Comprehension	MCQ

1975 లో భారతదేశంలో ఏ రాష్ట్రం విలీనం చేయబడింది.

1. మిజోరం
2. గోవా
3. సిక్కిం
4. అరుణాచల్ ప్రదేశ్

Options :

485584146829. 1
485584146830. 2
485584146831. 3
485584146832. 4

Question Number : 73 Question Id : 48558436708 Question Type : MCQ Option Shuffling : No Is Question Mandatory : No Calculator : None Response Time : N.A Think Time : N.A Minimum Instruction Time : 0

Correct Marks : 5 Wrong Marks : 1

Question Key Details :

Key	Value
Comprehension	MCQ

کون سی ریاست کا 1975 میں ہندوستان کے ساتھ اضمال ہوا؟

1. میزورم
2. گوا
3. سجم
4. اروناچل پردیش

Options :

485584146829. 1
485584146830. 2
485584146831. 3
485584146832. 4

Question Number : 74 Question Id : 48558436709 Question Type : MCQ Option Shuffling : No Is Question Mandatory : No Calculator : None Response Time : N.A Think Time : N.A Minimum Instruction Time : 0

Correct Marks : 5 Wrong Marks : 1

Question Key Details :

Key	Value
Comprehension	MCQ

Which Governor - General was infamous for executing the partition of Bengal in 1905 ?

1. Lord Ripon
2. Lord Chelmsford
3. Lord Canning
4. Lord Curzon

Options :

485584146833. 1
485584146834. 2
485584146835. 3
485584146836. 4

Question Number : 74 Question Id : 48558436709 Question Type : MCQ Option Shuffling : No Is Question Mandatory : No Calculator : None Response Time : N.A Think Time : N.A Minimum Instruction Time : 0

Correct Marks : 5 Wrong Marks : 1

Question Key Details :

Key	Value
Comprehension	MCQ

वर्ष 1905 में बंगाल का विभाजन करने के कारण कौन सा गवर्नर-जनरल कुख्यात हुए:

1. लॉर्ड रिपॉन
2. लॉर्ड कैम्सफोर्ड
3. लॉर्ड कैनिंग
4. लॉर्ड कर्जन

Options :

485584146833. 1
485584146834. 2
485584146835. 3
485584146836. 4

Question Number : 74 Question Id : 48558436709 Question Type : MCQ Option Shuffling : No Is Question Mandatory : No Calculator : None Response Time : N.A Think Time : N.A Minimum Instruction Time : 0

Correct Marks : 5 Wrong Marks : 1

Question Key Details :

Key	Value
Comprehension	MCQ

1905 চনত বঙ্গ বিভাজনৰ বাবে দায়ী গৱৰ্ণৰ জেনেৰেল কোন আছিল ?

1. লৰ্ড ৰিপন
2. লৰ্ড ছেমছফ'ৰ্ড
3. লৰ্ড কেনিং
4. লৰ্ড কাৰ্জন

Options :

485584146833. 1
485584146834. 2
485584146835. 3
485584146836. 4

Question Number : 74 Question Id : 48558436709 Question Type : MCQ Option Shuffling : No Is Question Mandatory : No Calculator : None Response Time : N.A Think Time : N.A Minimum Instruction Time : 0

Correct Marks : 5 Wrong Marks : 1

Question Key Details :

Key	Value
Comprehension	MCQ

1905 সালে বঙ্গভঙ্গ কার্যকরী করার জন্য কুখ্যাত হয়েছিল কোন গভর্নর জেনারেল ?

1. লর্ড রিপন
2. লর্ড চেমসফোর্ড
3. লর্ড ক্যানিং
4. লর্ড কার্জন

Options :

485584146833. 1
485584146834. 2
485584146835. 3
485584146836. 4

Question Number : 74 Question Id : 48558436709 Question Type : MCQ Option Shuffling : No Is Question Mandatory : No Calculator : None Response Time : N.A Think Time : N.A Minimum Instruction Time : 0

Correct Marks : 5 Wrong Marks : 1

Question Key Details :

Key	Value
Comprehension	MCQ

1905 মাং অংগাং নাং বিলাজনাং নাং অমলীকরুয়া করাবতা নামখীন গবর্নর জনরু কীড়া হুতা ?

1. বোর্ড রীপন
2. বোর্ড য়েব্রুর্স্ফোর্ড
3. বোর্ড কানীগ
4. বোর্ড কুর্জোন

Options :

485584146833. 1
485584146834. 2
485584146835. 3
485584146836. 4

Question Number : 74 Question Id : 48558436709 Question Type : MCQ Option Shuffling : No Is Question Mandatory : No Calculator : None Response Time : N.A Think Time : N.A Minimum Instruction Time : 0

Correct Marks : 5 Wrong Marks : 1

Question Key Details :

Key	Value
Comprehension	MCQ

1905ರಲ್ಲಿ ಬಂಗಾಳ ವಿಭಜನೆಯನ್ನು ನೆರವೇರಿಸಿದ ಕುಖ್ಯಾತಿಗೆ ಒಳಗಾದ ಗೌರ್ನರ್ ಜನರಲ್ ಯಾರು?

1. ಲಾರ್ಡ್ ರಿಪೋನ್
2. ಲಾರ್ಡ್ ಚೆಲ್ಮ್ಸ್‌ಫೋರ್ಡ್
3. ಲಾರ್ಡ್ ಕ್ಯಾನ್ಸಿಂಗ್
4. ಲಾರ್ಡ್ ಕರ್ಜನ್

Options :

485584146833. 1
485584146834. 2
485584146835. 3
485584146836. 4

Question Number : 74 Question Id : 48558436709 Question Type : MCQ Option Shuffling : No Is Question Mandatory : No Calculator : None Response Time : N.A Think Time : N.A Minimum Instruction Time : 0

Correct Marks : 5 Wrong Marks : 1

Question Key Details :

Key	Value
Comprehension	MCQ

1905 ೀಲ ಾಂಘಾಳಿ ವಿಭಜನಾಂ ನಡಪ್ಪಿಲಾಕುಿಯ ಘವರ್ಷಣ್ಣರಿ ಜನರಲಿ ಆಠರ್ ?

1. ಲೋಯ್ ರಿಪೋನ್
2. ಲೋಯ್ ಚೆಲ್ಮ್ಸ್‌ಫೋರ್ಡ್
3. ಲೋಯ್ ಕ್ಯಾನ್ಸಿಂಗ್
4. ಲೋಯ್ ಕುರ್ಜನ್

Options :

485584146833. 1
485584146834. 2
485584146835. 3
485584146836. 4

Question Number : 74 Question Id : 48558436709 Question Type : MCQ Option Shuffling : No Is Question Mandatory : No Calculator : None Response Time : N.A Think Time : N.A Minimum Instruction Time : 0

Correct Marks : 5 Wrong Marks : 1

Question Key Details :

Key	Value
Comprehension	MCQ

1905 मध्ये झालेल्या बंगालच्या फाळणीची अंमलबजावणी करणारे कुविख्यात गव्हर्नर जनरल कोण?

1. लॉर्ड रिपन
2. लॉर्ड चेमस्फोर्ड
3. लॉर्ड कॅनिंग
4. लॉर्ड कर्झन

Options :

485584146833. 1
485584146834. 2
485584146835. 3
485584146836. 4

Question Number : 74 Question Id : 48558436709 Question Type : MCQ Option Shuffling : No Is Question Mandatory : No Calculator : None Response Time : N.A Think Time : N.A Minimum Instruction Time : 0

Correct Marks : 5 Wrong Marks : 1

Question Key Details :

Key	Value
Comprehension	MCQ

1905 ମସିହାରେ ବେଙ୍ଗଲ ର ବିଭାଜନକୁ କାର୍ଯ୍ୟକାରୀ କରିବା ଯୋଗୁଁ କେଉଁ ଗଭର୍ନର-ଜେନରଲ କୁଖ୍ୟାତ ହୋଇଥିଲେ?

1. ଲର୍ଡ ରିପନ୍
2. ଲର୍ଡ ଚେମ୍ସ ଫୋର୍ଡ୍ (Chelmsford)
3. ଲର୍ଡ କ୍ୟାନିଙ୍ଗ (Canning)
4. ଲର୍ଡ କରଜନ୍ (Curzon)

Options :

485584146833. 1
485584146834. 2
485584146835. 3
485584146836. 4

Question Number : 74 Question Id : 48558436709 Question Type : MCQ Option Shuffling : No Is Question Mandatory : No Calculator : None Response Time : N.A Think Time : N.A Minimum Instruction Time : 0

Correct Marks : 5 Wrong Marks : 1

Question Key Details :

Key	Value
Comprehension	MCQ

ਜੋ ਗਵਰਨਰ ਜਨਰਲ 1905 ਵਿੱਚ ਬੰਗਾਲ ਦੀ ਵੰਡ ਨੂੰ ਅਮਲ ਵਿੱਚ ਲਿਆਉਣ ਲਈ ਮਸ਼ਹੂਰ ਸੀ?

1. ਲਾਰਡ ਰਿਪੋਨ
2. ਲਾਰਡ ਚੇਲਮਸਫੋਰਡ
3. ਲਾਰਡ ਕੈਨਿੰਗ
4. ਲਾਰਡ ਕਰਜ਼ਨ

Options :

485584146833. 1
485584146834. 2
485584146835. 3
485584146836. 4

Question Number : 74 Question Id : 48558436709 Question Type : MCQ Option Shuffling : No Is Question Mandatory : No Calculator : None Response Time : N.A Think Time : N.A Minimum Instruction Time : 0

Correct Marks : 5 Wrong Marks : 1

Question Key Details :

Key	Value
Comprehension	MCQ

1905 ਆਮ ਆਠਨੁ ਵਙਕਪ ਪਿਰਿਵਿਨੈਕਕਾਕ ਅਠਿਯਪਪੱਟ ਕਵਰਨਰ-ਯੋਯਨਰਲ ਯਾਰ?

1. ਰਿਪਪਨ ਪਿਰਪੁ
2. ਸੋਮਸਃਪੋਾਰਨੁ ਪਿਰਪੁ
3. ਓਕਨਨਿਙ ਪਿਰਪੁ
4. ਕਰਸਨ ਪਿਰਪੁ

Options :

485584146833. 1
485584146834. 2
485584146835. 3
485584146836. 4

Question Number : 74 Question Id : 48558436709 Question Type : MCQ Option Shuffling : No Is Question Mandatory : No Calculator : None Response Time : N.A Think Time : N.A Minimum Instruction Time : 0

Correct Marks : 5 Wrong Marks : 1

Question Key Details :

Key	Value
Comprehension	MCQ

1905 లో బెంగాల్ విభజనను అమలు చేయడంలో ఏ గవర్నర్ జనరల్ అపఖ్యాతి పాలయ్యారు?

1. లార్డ్ రిపన్
2. లార్డ్ చెల్మ్స్ ఫోర్డ్
3. లార్డ్ కన్నింగ్
4. లార్డ్ కర్జన్

Options :

485584146833. 1
485584146834. 2
485584146835. 3
485584146836. 4

Question Number : 74 Question Id : 48558436709 Question Type : MCQ Option Shuffling : No Is Question Mandatory : No Calculator : None Response Time : N.A Think Time : N.A Minimum Instruction Time : 0

Correct Marks : 5 Wrong Marks : 1

Question Key Details :

Key	Value
Comprehension	MCQ

کون سا گورنر جنرل بنگال کی 1905ء کی تقسیم کیلئے مشہور ہے ؟

1. لارڈ ریبین
2. لارڈ چیلسفورڈ
3. لارڈ کیننگ
4. لارڈ کرجن

Options :

485584146833. 1
485584146834. 2
485584146835. 3
485584146836. 4

Question Number : 75 Question Id : 48558436710 Question Type : MCQ Option Shuffling : No Is Question Mandatory : No Calculator : None Response Time : N.A Think Time : N.A Minimum Instruction Time : 0

Correct Marks : 5 Wrong Marks : 1

Question Key Details :

Key	Value
Comprehension	MCQ

Litmus test is a common test to check :

1. Acidic & Basic Nature of Solution
2. Rancidity of substance
3. Nutritional content of Fruit
4. Test Blood Sugar

Options :

485584146837. 1
485584146838. 2
485584146839. 3
485584146840. 4

Question Number : 75 Question Id : 48558436710 Question Type : MCQ Option Shuffling : No Is Question Mandatory : No Calculator : None Response Time : N.A Think Time : N.A Minimum Instruction Time : 0

Correct Marks : 5 Wrong Marks : 1

Question Key Details :

Key	Value
Comprehension	MCQ

लिटमस परीक्षण किसकी जाँच करने के लिए एक सामान्य परीक्षण है:

1. विलयन की अम्लीय तथा क्षारीय प्रकृति
2. पदार्थ की विकृत गंधिता
3. फलों के पोषक तत्व
4. रक्त में शर्करा की जाँच

Options :

485584146837. 1
485584146838. 2
485584146839. 3
485584146840. 4

Question Number : 75 Question Id : 48558436710 Question Type : MCQ Option Shuffling : No Is Question Mandatory : No Calculator : None Response Time : N.A Think Time : N.A Minimum Instruction Time : 0

Correct Marks : 5 Wrong Marks : 1

Question Key Details :

Key	Value
Comprehension	MCQ

লিটমাছ পৰীক্ষা এটা সাধাৰণ পৰীক্ষা যাক কৰা হয়:

1. দ্ৰব্যৰ আয়নিক আৰু ক্ষাৰকীয় প্ৰকৃতি নিৰূপণ কৰিবলৈ
2. বস্তুৰ ক্ষয়ীভৱন নিৰূপণ কৰিবলৈ
3. ফল এটাৰ পুষ্টিকৰ উপাদানবোৰ নিৰূপণ কৰিবলৈ
4. তেজত শৰ্কৰাৰ পৰিমাণ পৰীক্ষা কৰিবলৈ

Options :

485584146837. 1
485584146838. 2
485584146839. 3
485584146840. 4

Question Number : 75 Question Id : 48558436710 Question Type : MCQ Option Shuffling : No Is Question Mandatory : No Calculator : None Response Time : N.A Think Time : N.A Minimum Instruction Time : 0

Correct Marks : 5 Wrong Marks : 1

Question Key Details :

Key	Value
Comprehension	MCQ

লিটমাস পৰীক্ষা কৰা হয় _____ জানাৰ জন্য।

1. দ্ৰবনেৰ অম্লীয় ও মৌলিক প্ৰকৃতি
2. পদাৰ্থেৰ ৰাস্মিডিটি
3. ফলেৰ পুষ্টি উপাদান
4. ৰক্তেৰ শৰ্কৰা পৰীক্ষা

Options :

485584146837. 1
485584146838. 2
485584146839. 3
485584146840. 4

Question Number : 75 Question Id : 48558436710 Question Type : MCQ Option Shuffling : No Is Question Mandatory : No Calculator : None Response Time : N.A Think Time : N.A Minimum Instruction Time : 0

Correct Marks : 5 Wrong Marks : 1

Question Key Details :

Key	Value
Comprehension	MCQ

વિટમસ કસોટી એ એક સામાન્ય કસોટી છે જે તપાસવા માટે થાય છે. તો.

1. દ્વાવણની એસિડીક અને બેઝીક પ્રકૃતિ
2. પદાર્થની વિષમતા (પદાર્થનું ખોરું થવું)
3. ફળમાં રહેલા પોષકતત્વો
4. બલ્ક શર્કરા કસોટી

Options :

485584146837. 1
485584146838. 2
485584146839. 3
485584146840. 4

Question Number : 75 Question Id : 48558436710 Question Type : MCQ Option Shuffling : No Is Question Mandatory : No Calculator : None Response Time : N.A Think Time : N.A Minimum Instruction Time : 0

Correct Marks : 5 Wrong Marks : 1

Question Key Details :

Key	Value
Comprehension	MCQ

લીટ્મસ પરીક્ષೆಯુ ઇદન્નુ પરીશીલિસુવ ંદુ સમન્ય પરીક્ષેયુગિદે:

1. દ્રવણદ આમ્લિય મત્તુ પ્રત્યામ્લિય ગુણ
2. પદાર્થગલ અસહ્ય રુચી
3. હલ્લુગલ પૂરેષકાંશદ અંશગલુ
4. રક્તદ સક્કરે પરીક્ષે

Options :

485584146837. 1
485584146838. 2
485584146839. 3
485584146840. 4

Question Number : 75 Question Id : 48558436710 Question Type : MCQ Option Shuffling : No Is Question Mandatory : No Calculator : None Response Time : N.A Think Time : N.A Minimum Instruction Time : 0

Correct Marks : 5 Wrong Marks : 1

Question Key Details :

Key	Value
Comprehension	MCQ

ലിറ്റമസ് ടെസ്റ്റ് എന്ത് പരിശോധിക്കുന്നു ?

1. ലായിനിയുടെ അമ്ല-ക്ഷാര സ്വഭാവങ്ങൾ
2. പദാർത്ഥത്തിന്റെ അസന്തുലിതാവസ്ഥ
3. പഴുത്തിന്റെ പോഷകസമൃദ്ധി
4. രക്തത്തിലെ പഞ്ചാര പരിശോധിക്കുക

Options :

485584146837. 1
485584146838. 2
485584146839. 3
485584146840. 4

Question Number : 75 Question Id : 48558436710 Question Type : MCQ Option Shuffling : No Is Question Mandatory : No Calculator : None Response Time : N.A Think Time : N.A Minimum Instruction Time : 0

Correct Marks : 5 Wrong Marks : 1

Question Key Details :

Key	Value
Comprehension	MCQ

लिटमस चाचणी ही द्रावाची सामान्यतः _____ तपासण्यासाठी वापरतात.

1. द्रावाचे आम्ल आणि द्रावाचे स्वरूप
2. पदार्थाची उग्रता
3. फळातील पोषण करणारे घटक
4. रक्तशर्करा चाचणी

Options :

485584146837. 1
485584146838. 2
485584146839. 3
485584146840. 4

Question Number : 75 Question Id : 48558436710 Question Type : MCQ Option Shuffling : No Is Question Mandatory : No Calculator : None Response Time : N.A Think Time : N.A Minimum Instruction Time : 0

Correct Marks : 5 Wrong Marks : 1

Question Key Details :

Key	Value
Comprehension	MCQ

କାହାର ପରୀକ୍ଷା କରିବା ପାଇଁ ଲିଚମସ୍ ଚେଷ୍ଟା ଗୋଟିଏ ବହୁ ବ୍ୟବହୃତ ପରୀକ୍ଷା?

1. ଅମ୍ଳୀୟ ଏବଂ ଆଧାରୀୟ ପ୍ରକୃତିର ଦ୍ରବଣ (Acidic & Basic Nature of Solution)
2. ପଦାର୍ଥର ସ୍ୱାଦ ଅବସ୍ଥା (Rancidity of substance)
3. ଫଳର ପୋଷକ ତତ୍ତ୍ୱ ଉପାଦାନ (Nutritional content of Fruit)
4. ରକ୍ତ ଶର୍କରା ପରୀକ୍ଷା (Test Blood Sugar)

Options :

485584146837. 1
485584146838. 2
485584146839. 3
485584146840. 4

Question Number : 75 Question Id : 48558436710 Question Type : MCQ Option Shuffling : No Is Question Mandatory : No Calculator : None Response Time : N.A Think Time : N.A Minimum Instruction Time : 0

Correct Marks : 5 Wrong Marks : 1

Question Key Details :

Key	Value
Comprehension	MCQ

ଲିଚମସ୍ ଟେସ୍ଟ ଇଂକ୍ ସଫାରନ ଟେସ୍ଟ ହେ -

1. ଡେଜେନେସନ୍ ଏବଂ ମୂଳ ପ୍ରକୃତିର ଦ୍ରବଣ ଲାଏ
2. ଅବସ୍ଥା ଲାଏ
3. ଫଳର ପୋଷକ ସମଗ୍ରଣୀ
4. ରକ୍ତ ଶର୍କରା ଲାଏ

Options :

485584146837. 1
485584146838. 2
485584146839. 3
485584146840. 4

Question Number : 75 Question Id : 48558436710 Question Type : MCQ Option Shuffling : No Is Question Mandatory : No Calculator : None Response Time : N.A Think Time : N.A Minimum Instruction Time : 0

Correct Marks : 5 Wrong Marks : 1

Question Key Details :

Key	Value
Comprehension	MCQ

లిత్తుమస్ శోతఱై ంతైక్ కణ్డఱియ పయన్బఢుత్తప్పఢుమ్ పొతువఱఱ
శోతఱైయఱక్రమ్?

1. కఱైశలిన్ అమిల మఱ్ఱఱమ్ కఱఱత్తన్మెయెక్ కణ్డఱియ
2. పొఱఱఱిన్ శీఱ్ఱులెవ
3. పఱ్ఱింగఱిల్ ఁడఢ్డశ్శత్తు ఁఱఱఢక్కత్తైక్ కణ్డఱియ
4. ఱిఱత్త శఱ్ఱకఱై అఱఱైవ శోతిక్క

Options :

- 485584146837. 1
- 485584146838. 2
- 485584146839. 3
- 485584146840. 4

**Question Number : 75 Question Id : 48558436710 Question Type : MCQ Option Shuffling : No Is Question Mandatory :
No Calculator : None Response Time : N.A Think Time : N.A Minimum Instruction Time : 0
Correct Marks : 5 Wrong Marks : 1**

Question Key Details :

Key	Value
Comprehension	MCQ

లిట్యూస్ పఱ్ఱిక్ అనేది దేనిని తనిఖి చేయడానికి ఒక సఱఱఱణ పఱ్ఱిక్ :

1. ఢ్రఱఱణం యొక్క ఆష్ఠ మఱియు క్షఱఱ స్వభఱఱం
2. పదఱఱ్ఢం యొక్క మృదుత్వం
3. పండు యొక్క పోషక పదఱఱ్ఢం
4. రక్తంలో చక్కెర పఱ్ఱిక్

Options :

- 485584146837. 1
- 485584146838. 2
- 485584146839. 3
- 485584146840. 4

**Question Number : 75 Question Id : 48558436710 Question Type : MCQ Option Shuffling : No Is Question Mandatory :
No Calculator : None Response Time : N.A Think Time : N.A Minimum Instruction Time : 0
Correct Marks : 5 Wrong Marks : 1**

Question Key Details :

Key	Value
Comprehension	MCQ

لٹمس ٹیسٹ (Litmus test) ایک عام ٹیسٹ ہے جو کیا دیکھنے کیلئے استعمال ہوتا ہے ؟

1. کسی Solution کے تیزابی یا قلیائی ہونے کی جانچ
2. کسی شے کی سٹرانڈ
3. میوے میں مقوی غذا کی مقدار
4. Blood Sugar کی جانچ کیلئے

Options :

485584146837. 1
485584146838. 2
485584146839. 3
485584146840. 4

Question Number : 76 Question Id : 48558436711 Question Type : MCQ Option Shuffling : No Is Question Mandatory : No Calculator : None Response Time : N.A Think Time : N.A Minimum Instruction Time : 0

Correct Marks : 5 Wrong Marks : 1

Question Key Details :

Key	Value
Comprehension	MCQ

The process of transfer of hereditary character from one generation to another is called genetics. Who is called the 'Father of Genetics', famous for his pea-plant experiment ?

1. W. Wattson
2. G. J. Mendal
3. Waldeyer
4. R. H. Whittaker

Options :

485584146841. 1
485584146842. 2
485584146843. 3
485584146844. 4

Question Number : 76 Question Id : 48558436711 Question Type : MCQ Option Shuffling : No Is Question Mandatory : No Calculator : None Response Time : N.A Think Time : N.A Minimum Instruction Time : 0

Correct Marks : 5 Wrong Marks : 1

Question Key Details :

Key	Value
Comprehension	MCQ

वंशागत लक्षणों का एक पीढ़ी से दूसरी पीढ़ी में हस्तांतरण की प्रक्रिया अनुवंशिकी कहलाती है। 'अनुवंशिकी का जनक' किसे कहते हैं, जो अपने मटर के पौधों पर प्रयोग के जो लिए प्रसिद्ध भी थे:

1. डब्ल्यू. वॉटसन
2. जी.जे. मेंडल
3. वॉल्डेयर
4. आर.एच. बहाइटर

Options :

485584146841. 1
485584146842. 2
485584146843. 3
485584146844. 4

Question Number : 76 Question Id : 48558436711 Question Type : MCQ Option Shuffling : No Is Question Mandatory : No Calculator : None Response Time : N.A Think Time : N.A Minimum Instruction Time : 0

Correct Marks : 5 Wrong Marks : 1

Question Key Details :

Key	Value
Comprehension	MCQ

এটা প্ৰজন্মৰ পৰা আনটোলৈ বংশগত চৰিত্ৰসমূহ সংক্ৰমণ হোৱা প্ৰক্ৰিয়াটোক জেনেটিক্স বুলি কোৱা হয়। "জেনেটিক্সৰ জন্মদাতা" বুলি কাক কোৱা হয় যি মটৰমাহৰ সম্পৰীক্ষাৰ বাবে জনাজাত ?

1. ডব্লিউ ৱাটছন
2. জি.জে. মেণ্ডেল
3. ৱালডিয়াৰ
4. আৰ.এইছ. হুইটেকাৰ

Options :

485584146841. 1
485584146842. 2
485584146843. 3
485584146844. 4

Question Number : 76 Question Id : 48558436711 Question Type : MCQ Option Shuffling : No Is Question Mandatory : No Calculator : None Response Time : N.A Think Time : N.A Minimum Instruction Time : 0

Correct Marks : 5 Wrong Marks : 1

Question Key Details :

Key	Value
Comprehension	MCQ

বংশগত চরিত্র এক প্রজন্ম থেকে অন্য প্রজন্মে স্থানান্তরের প্রক্রিয়াকে জেনেটিক্স বলে। কাকে জেনেটিক্সের জনক বলা হয় যিনি বিখ্যাত ছিলেন মটর গাছের পরীক্ষার জন্য ?

1. ডব্লু ওয়াটসন
2. জি. জে. মেন্ডেল
3. ওয়ালাডেয়ার
4. আর এইচ. ওয়াটিকের

Options :

485584146841. 1
485584146842. 2
485584146843. 3
485584146844. 4

Question Number : 76 Question Id : 48558436711 Question Type : MCQ Option Shuffling : No Is Question Mandatory : No Calculator : None Response Time : N.A Think Time : N.A Minimum Instruction Time : 0

Correct Marks : 5 Wrong Marks : 1

Question Key Details :

Key	Value
Comprehension	MCQ

বারসাগত পাতনে ঐক পেটীমাং থী ঐঐ পেটীমাং স্থানাংতরিত করবানী প্রক্রিয়ানে জিনেটিকস কহে ঐ. বিরাজানা প্রয়োগ মাটে প্রখ্যাত ঐবা জিনেটিকসনা পিতা তরীক কানে ঐগণ্যবামাং ঐবে ঐ ?

1. ও বাতসীন
2. জি জি মেন্ডেল
3. ওয়াডেয়ার
4. আর এইচ. ওয়াটিকের

Options :

485584146841. 1
485584146842. 2
485584146843. 3
485584146844. 4

Question Number : 76 Question Id : 48558436711 Question Type : MCQ Option Shuffling : No Is Question Mandatory : No Calculator : None Response Time : N.A Think Time : N.A Minimum Instruction Time : 0

Correct Marks : 5 Wrong Marks : 1

Question Key Details :

Key	Value
Comprehension	MCQ

ಆನುವಂಶೀಯ ಗುಣಗಳನ್ನು ಒಂದು ಸಂತತಿಯಿಂದ ಒಂದು ಸಂತತಿಗೆ ವರ್ಗಾಯಿಸುವ ಪ್ರಕ್ರಿಯೆಯನ್ನು ತಳಿಶಾಸ್ತ್ರ ಎಂದು ಕರೆಯುತ್ತಾರೆ. ಬಟಾಣಿ ಸಸ್ಯಗಳ ಮೇಲಿನ ಪ್ರಯೋಗಕ್ಕೆ ಪ್ರಸಿದ್ಧವಾದ 'ತಳಿಶಾಸ್ತ್ರದ ಪಿತಾಮಹ' ಎಂದು ಯಾರನ್ನು ಕರೆಯುತ್ತಾರೆ?

1. ಡಬ್ಲ್ಯೂ. ವಾಟ್ಸನ್
2. ಜಿ.ಎಸ್. ಮೆಂಡೆಲ್
3. ವಾಲ್ಟೇಯರ್
4. ಆರ್.ಎಚ್. ವಿಟ್ಟೆಬೇಕರ್

Options :

485584146841. 1
485584146842. 2
485584146843. 3
485584146844. 4

Question Number : 76 Question Id : 48558436711 Question Type : MCQ Option Shuffling : No Is Question Mandatory : No Calculator : None Response Time : N.A Think Time : N.A Minimum Instruction Time : 0

Correct Marks : 5 Wrong Marks : 1

Question Key Details :

Key	Value
Comprehension	MCQ

ಪಾರമ്പರಿಯಾಗಿ ಒಂದು ಸ್ವರೂಪದ ಒಂದು ಉದಾಹರಣೆಯಲ್ಲಿ ನಿನ್ನೂ ಮತ್ತೊಂದು ಉದಾಹರಣೆಯಲ್ಲಿಯೂ ಕಂಡುಬರುವಂತಹ ಒಂದು ಉದಾಹರಣೆಯನ್ನು ನೀಡಿ. ಅದು ಏನು? ಅದನ್ನು ಉದಾಹರಣೆಯಲ್ಲಿ ನೀಡಿ.

1. w. ವಾಟ್ಸನ್
2. G.J ಮೆಂಡೆಲ್
3. ವಾಲ್ಟೇಯರ್
4. R.H ವಿಟ್ಟೆಬೇಕರ್

Options :

485584146841. 1
485584146842. 2
485584146843. 3
485584146844. 4

Question Number : 76 Question Id : 48558436711 Question Type : MCQ Option Shuffling : No Is Question Mandatory : No Calculator : None Response Time : N.A Think Time : N.A Minimum Instruction Time : 0

Correct Marks : 5 Wrong Marks : 1

Question Key Details :

Key	Value
Comprehension	MCQ

एका पिढीकडून दुसऱ्या पिढीकडे अनुवंशिक गुणवैशिष्ट्यांच्या होणाऱ्या संक्रमणाच्या प्रक्रियेस अनुवंश म्हणतात. वाटाण्याचा रोपावरील प्रयोगासाठी प्रसिद्ध असलेल्या कोणास 'अनुवंश शास्त्राचा जनक' असे म्हणतात?

1. डब्ल्यू.वॉटसन
2. जी. जे. मेडल
3. वॉल्डियर
4. आर. एच. व्हिटकर

Options :

485584146841. 1
485584146842. 2
485584146843. 3
485584146844. 4

Question Number : 76 Question Id : 48558436711 Question Type : MCQ Option Shuffling : No Is Question Mandatory : No Calculator : None Response Time : N.A Think Time : N.A Minimum Instruction Time : 0

Correct Marks : 5 Wrong Marks : 1

Question Key Details :

Key	Value
Comprehension	MCQ

गोरुची वंशरु थारु वंशरु, वंशरुनुकुरीक करीतु झानाडरुस हसुडरुस प्रकुरीयानु थानु वंशरु/कुरीक कुरीयानु। कुरीयानु 'कुरीकुर करीक' (Father of Genetics) वेकुरी कुरीयानु। यीकुरी मरुतु उकुवरे वंशरु वरुणस कुरीयानु प्रकुरीयानु।

1. W. Wattson
2. G. J. Mendal
3. Waldeyer
4. R. H. Whittaker

Options :

485584146841. 1
485584146842. 2
485584146843. 3
485584146844. 4

Question Number : 76 Question Id : 48558436711 Question Type : MCQ Option Shuffling : No Is Question Mandatory : No Calculator : None Response Time : N.A Think Time : N.A Minimum Instruction Time : 0

Correct Marks : 5 Wrong Marks : 1

Question Key Details :

Key	Value
Comprehension	MCQ

ਖਾਨਦਾਨ ਦੇ ਤਬਾਦਲੇ ਦੀ ਪ੍ਰਕ੍ਰਿਆ, ਇੱਕ ਪੀੜੀ ਤੋਂ ਦੂਜੀ ਪੀੜੀ ਦੇ ਅੱਖਰ ਨੂੰ ਜੈਨੇਟਿਕਸ ਕਹਿੰਦੇ ਹਨ। ਕਿਸਨੂੰ " ਜੈਨੇਟਿਕਸ ਦਾ ਪਿਤਾ " ਕਿਹਾ ਜਾਂਦਾ ਹੈ, ਜੋ ਆਪਣੇ ਮਰਦ ਦੇ ਪ੍ਰਯੋਗ ਲਈ ਮਸ਼ਹੂਰ ਹੈ?

1. ਡਬਲਿਊ ਵਾਟਸਨ
2. ਜੀ. ਜੇ. ਮੈਂਡਲ
3. ਵਾਲਡੇਅਰ
4. ਆਰ. ਐਚ. ਵਿਟੇਕਰ

Options :

485584146841. 1
485584146842. 2
485584146843. 3
485584146844. 4

Question Number : 76 Question Id : 48558436711 Question Type : MCQ Option Shuffling : No Is Question Mandatory : No Calculator : None Response Time : N.A Think Time : N.A Minimum Instruction Time : 0

Correct Marks : 5 Wrong Marks : 1

Question Key Details :

Key	Value
Comprehension	MCQ

ਮਰਪੁਵਝੀ ਪਠੱਪੁਕਠਏ ਓਰੁ ਤਠਏਮੁਠਏਧੀਲੀਰੁਨੁਤੁ ਮਹੁਰੋਰਾਨੁ ਤਠਏਮੁਠਏਕੁਕੁ ਪਰੀਮਾਹੁਰੁਮੁ ਸੇਧਲੁਮੁਠਏ ਮਰਪੀਧਲੁ ਏਨੁਰੁ ਅਠਏਕੁਕੁਪੁਠੁਕੀਰੁਤੁ. 'ਮਰਪੀਧਲੀਨੁ ਤਨੁਠਏ' ਏਨੁਰੁ ਅਠਏਕੁਕੁਪੁਠੁਪਵਰੁ ਧਾਾਰੁ, ਓਵਰੁ ਤਨੁਠੁ ਨੀਲਕੁਕੁਠਏ ਤਾਵਰੁ ਸੋਠਠਏਨੁਕੁਕਾਕੁਵੁਮੁ ਅਹੀਧਪੁਠੁਕੀਰਾਾਰੁ?

1. W. ਵਾਠੁਸਨੁ
2. G. J. ਮੇਠਨੁਠਲੁ
3. ਵਾਲੁਠਏਧਰੁ
4. R. H. ਵੇਵੁਠੁਠਕੁਕੁਰੁ

Options :

485584146841. 1
485584146842. 2
485584146843. 3
485584146844. 4

Question Number : 76 Question Id : 48558436711 Question Type : MCQ Option Shuffling : No Is Question Mandatory : No Calculator : None Response Time : N.A Think Time : N.A Minimum Instruction Time : 0

Correct Marks : 5 Wrong Marks : 1

Question Key Details :

Key	Value
Comprehension	MCQ

వంశపారంపర్య లక్షణాలను ఒక తరం నుండి మరొక తరానికి బదిలీ చేసే ప్రక్రియను జన్యుశాస్త్రం అంటారు. వీ ప్లాంట్ ప్రయోగానికి ప్రసిద్ధి చెందిన ఏ శాస్త్రవేత్త జన్యుశాస్త్రం యొక్క పితామహుడిగా పిలువబడ్డారు ?

1. W. వాటసన్
2. జి.జె. మెండల్
3. వాల్డీయర్
4. ఆర్. హెచ్. విట్టాకర్

Options :

485584146841. 1
485584146842. 2
485584146843. 3
485584146844. 4

Question Number : 76 Question Id : 48558436711 Question Type : MCQ Option Shuffling : No Is Question Mandatory : No Calculator : None Response Time : N.A Think Time : N.A Minimum Instruction Time : 0

Correct Marks : 5 Wrong Marks : 1

Question Key Details :

Key	Value
Comprehension	MCQ

ایک نسل سے دوسری نسل میں وراثتی خصوصیات کی منتقلی کو جینیات کہتے ہیں۔ جینیات کا بائی کون ہے جو مٹر کے پودوں کے ساتھ تجربوں کیلئے مشہور ہے ؟

1. ڈبلیو واٹسن
2. جی جے مینڈل
3. والڈیئر
4. آر ایچ وٹیکر

Options :

485584146841. 1
485584146842. 2
485584146843. 3
485584146844. 4

Question Number : 77 Question Id : 48558436712 Question Type : MCQ Option Shuffling : No Is Question Mandatory : No Calculator : None Response Time : N.A Think Time : N.A Minimum Instruction Time : 0

Correct Marks : 5 Wrong Marks : 1

Question Key Details :

Key	Value
Comprehension	MCQ

Match List I with List II

LIST I		LIST II	
A.	A Unit of Length	I.	Chandrashekar limit
B.	A Unit of Mass	II.	Leap year
C.	A Unit of Time	III.	Parsec
D.	A Unit of Work	IV.	Joule

Choose the correct answer from the options given below:

1. A-I, B-II, C-III, D-IV
2. A-III, B-I, C-II, D-IV
3. A-I, B-III, C-IV, D-II
4. A-II, B-III, C-I, D-IV

Options :

485584146845. 1
485584146846. 2
485584146847. 3
485584146848. 4

Question Number : 77 Question Id : 48558436712 Question Type : MCQ Option Shuffling : No Is Question Mandatory : No Calculator : None Response Time : N.A Think Time : N.A Minimum Instruction Time : 0

Correct Marks : 5 Wrong Marks : 1

Question Key Details :

Key	Value
Comprehension	MCQ

सूची I का मिलान सूची II से कीजिए

LIST I		LIST II	
A.	लंबाई का मात्रक	I.	चन्द्रशेखर सीमा
B.	द्रव्यमान का मात्रक	II.	अधि वर्ष (लिप वर्ष)
C.	समय का मात्रक	III.	पारसेक
D.	कार्य का मात्रक	IV.	जूल

नीचे दिए गए विकल्पों में से सही उत्तर का चयन कीजिए:

1. A-I, B-II, C-III, D-IV
2. A-III, B-I, C-II, D-IV
3. A-I, B-III, C-IV, D-II
4. A-II, B-III, C-I, D-IV

Options :

485584146845. 1

485584146846. 2
485584146847. 3
485584146848. 4

**Question Number : 77 Question Id : 48558436712 Question Type : MCQ Option Shuffling : No Is Question Mandatory :
No Calculator : None Response Time : N.A Think Time : N.A Minimum Instruction Time : 0**

Correct Marks : 5 Wrong Marks : 1

Question Key Details :

Key	Value
Comprehension	MCQ

তালিকা I-ৰ সৈতে তালিকা II মিলোৱা

তালিকা I		তালিকা II	
A.	দিৰ্ঘ্যৰ একক	I.	চন্দ্ৰশেখৰ সীমা
B.	ভৰৰ একক	II.	লিপয়েৰ (অধিবৰ্ষ)
C.	সময়ৰ একক	III.	পাৰছেক
D.	কাৰ্য্যৰ একক	IV.	জুল

তলৰ বিকল্পসমূহৰপৰা শুদ্ধ উত্তৰটো বাছি উলিওৱা:

1. A-I, B-II, C-III, D-IV
2. A-III, B-I, C-II, D-IV
3. A-I, B-III, C-IV, D-II
4. A-II, B-III, C-I, D-IV

Options :

485584146845. 1
485584146846. 2
485584146847. 3
485584146848. 4

**Question Number : 77 Question Id : 48558436712 Question Type : MCQ Option Shuffling : No Is Question Mandatory :
No Calculator : None Response Time : N.A Think Time : N.A Minimum Instruction Time : 0**

Correct Marks : 5 Wrong Marks : 1

Question Key Details :

Key	Value
Comprehension	MCQ

তালিকা I এর সাথে তালিকা II মেলাও

তালিকা I		তালিকা II	
A.	দৈর্ঘ্যের একক	I.	চন্দ্রশেখর সীমা বা লিমিট
B.	ভরের একক	II.	লিপ ইয়ার
C.	সময়ের একক	III.	পার্সেক
D.	কাজের একক	IV.	জুল

নীচের বিকল্পগুলি থেকে সঠিক উত্তর চিহ্নিত কর:

1. A-I, B-II, C-III, D-IV
2. A-III, B-I, C-II, D-IV
3. A-I, B-III, C-IV, D-II
4. A-II, B-III, C-I, D-IV

Options :

485584146845. 1
485584146846. 2
485584146847. 3
485584146848. 4

Question Number : 77 Question Id : 48558436712 Question Type : MCQ Option Shuffling : No Is Question Mandatory : No Calculator : None Response Time : N.A Think Time : N.A Minimum Instruction Time : 0

Correct Marks : 5 Wrong Marks : 1

Question Key Details :

Key	Value
Comprehension	MCQ

সূচি I সাথে সূচি II নে জাও।

সূচি I		সূচি II	
A.	লম্বাঠনো ঞ্ক্রম	I.	Chandrashekar limit
B.	ধ্রনো ঞ্ক্রম	II.	Leap year
C.	সময় নো ঞ্ক্রম	III.	Parsec
D.	ক্র্যনো ঞ্ক্রম	IV.	Joule

নীচে আপোবা বিক্রয়োমাংথী সাযো জবাব পসংক্র করো.

1. A-I, B-II, C-III, D-IV
2. A-III, B-I, C-II, D-IV
3. A-I, B-III, C-IV, D-II
4. A-II, B-III, C-I, D-IV

Options :

485584146845. 1

485584146846. 2

485584146847. 3

485584146848. 4

Question Number : 77 Question Id : 48558436712 Question Type : MCQ Option Shuffling : No Is Question Mandatory : No Calculator : None Response Time : N.A Think Time : N.A Minimum Instruction Time : 0

Correct Marks : 5 Wrong Marks : 1

Question Key Details :

Key	Value
Comprehension	MCQ

ಪಟ್ಟಿ I ಅನ್ನು ಪಟ್ಟಿ II ರ ಜೊತೆ ಹೊಂದಿಸಿ

ಪಟ್ಟಿ - I		ಪಟ್ಟಿ - II	
A.	ಉದ್ಭವ ಮಾಪಕ	I.	ಚಂದ್ರಶೇಖರ್ ಮಿತಿ
B.	ರಾಶಿಯ ಮಾಪಕ	II.	ಲೀಪ್ ಇಯರ್ (ಅಧಿಕ ವರ್ಷ)
C.	ಕಾಲದ ಮಾಪಕ	III.	ಪಾರ್ಸೆಕ್
D.	ಕಾರ್ಯದ ಮಾಪಕ	IV.	ಜೌಲ್

ಕೆಳಗೆ ನೀಡಿರುವ ಆಯ್ಕೆಗಳಿಂದ ಸರಿಯಾದ ಉತ್ತರವನ್ನು ಆರಿಸಿ:

1. A-I, B-II, C-III, D-IV
2. A-III, B-I, C-II, D-IV
3. A-I, B-III, C-IV, D-II
4. A-II, B-III, C-I, D-IV

Options :

485584146845. 1

485584146846. 2

485584146847. 3

485584146848. 4

Question Number : 77 Question Id : 48558436712 Question Type : MCQ Option Shuffling : No Is Question Mandatory : No Calculator : None Response Time : N.A Think Time : N.A Minimum Instruction Time : 0

Correct Marks : 5 Wrong Marks : 1

Question Key Details :

Key	Value
Comprehension	MCQ

ചേരുംപടി ചേർക്കുക

പട്ടിക I		പട്ടിക II	
A.	നീളത്തിന്റെ അളവ്	I.	ചന്ദ്രശേഖർ ലിമിറ്റ്
B.	പിണ്ഡത്തിന്റെ അളവ്	II.	ലീപ്പ് ഇയർ
C.	സമയത്തിന്റെ അളവ്	III.	പാർസിക്
D.	പ്രവൃത്തിയുടെ അളവ്	IV.	ജൂൾ

ചുവടെ കൊടുത്തിരിക്കുന്നവയിൽ നിന്നും ശരിയായതെഴുതുക :

1. A-I, B-II, C-III, D-IV
2. A-III, B-I, C-II, D-IV
3. A-I, B-III, C-IV, D-II
4. A-II, B-III, C-I, D-IV

Options :

485584146845. 1
485584146846. 2
485584146847. 3
485584146848. 4

Question Number : 77 Question Id : 48558436712 Question Type : MCQ Option Shuffling : No Is Question Mandatory : No Calculator : None Response Time : N.A Think Time : N.A Minimum Instruction Time : 0

Correct Marks : 5 Wrong Marks : 1

Question Key Details :

Key	Value
Comprehension	MCQ

यादी I व यादी II जुळवा.

यादी I		यादी II	
A.	एककी लांबी	I.	चंद्रशेखर लिमिट
B.	एककी वस्तुमान	II.	लिप वर्ष
C.	एककी वेळ	III.	पासेक
D.	एककी कार्य	IV.	ज्युल

खाली दिलेल्या पर्यायातून योग्य पर्याय निवडा.

1. A-I, B-II, C-III, D-IV
2. A-III, B-I, C-II, D-IV
3. A-I, B-III, C-IV, D-II
4. A-II, B-III, C-I, D-IV

Options :

485584146845. 1
485584146846. 2

485584146847. 3
485584146848. 4

Question Number : 77 Question Id : 48558436712 Question Type : MCQ Option Shuffling : No Is Question Mandatory : No Calculator : None Response Time : N.A Think Time : N.A Minimum Instruction Time : 0

Correct Marks : 5 Wrong Marks : 1

Question Key Details :

Key	Value
Comprehension	MCQ

ତାଲିକା I ସହିତ ତାଲିକା II କୁ ମିଳାନ୍ତୁ

ତାଲିକା I		ତାଲିକା II	
A.	ଲିମ୍ପ ର ଏକକ	I.	ଚନ୍ଦ୍ରଶେଖର ସୀମା (Chandrashekar limit)
B.	ବସ୍ତୁତ୍ୱ ର ଏକକ	II.	ଲିମ୍ପ ବର୍ଷ (Leap year)
C.	ସମୟ ର ଏକକ	III.	ପାରସେକ୍ (Parsec)
D.	କାର୍ଯ୍ୟ ର ଏକକ	IV.	ଜୁଲ୍ (Joule)

ନିମ୍ନ ବିକଳ୍ପ ଗୁଡ଼ିକରୁ ସଠିକ୍ ଉତ୍ତରଟି ଚିହ୍ନଟ କରନ୍ତୁ:

1. A-I, B-II, C-III, D-IV
2. A-III, B-I, C-II, D-IV
3. A-I, B-III, C-IV, D-II
4. A-II, B-III, C-I, D-IV

Options :

485584146845. 1
485584146846. 2
485584146847. 3
485584146848. 4

Question Number : 77 Question Id : 48558436712 Question Type : MCQ Option Shuffling : No Is Question Mandatory : No Calculator : None Response Time : N.A Think Time : N.A Minimum Instruction Time : 0

Correct Marks : 5 Wrong Marks : 1

Question Key Details :

Key	Value
Comprehension	MCQ

ਸੂਚੀ I ਦਾ ਸੂਚੀ II ਨਾਲ ਮਿਲਾਣ ਕਰੋ:

ਸੂਚੀ I		ਸੂਚੀ II	
A.	ਲੰਬਾਈ ਦੀ ਇੱਕ ਇਕਾਈ	I.	ਸੰਦਰਸ਼ੇਖਰ ਲਿਮਟ (ਸੀਮਾ)
B.	ਪੁੰਜ ਦੀ ਇੱਕ ਇਕਾਈ	II.	ਲੀਪ ਸਾਲ
C.	ਜ਼ਮੇਂ ਦੀ ਇੱਕ ਇਕਾਈ	III.	ਪਾਰਸੇਕ
D.	ਕੰਮ ਦੀ ਇੱਕ ਇਕਾਈ	IV.	ਜੁਲ

ਹੇਠਾਂ ਦਿੱਤੇ ਵਿਕਲਪਾਂ ਵਿੱਚੋਂ ਸਹੀ ਉੱਤਰ ਚੁਣੋ:

1. A-I, B-II, C-III, D-IV
2. A-III, B-I, C-II, D-IV
3. A-I, B-III, C-IV, D-II
4. A-II, B-III, C-I, D-IV

Options :

485584146845. 1
485584146846. 2
485584146847. 3
485584146848. 4

Question Number : 77 Question Id : 48558436712 Question Type : MCQ Option Shuffling : No Is Question Mandatory : No Calculator : None Response Time : N.A Think Time : N.A Minimum Instruction Time : 0

Correct Marks : 5 Wrong Marks : 1

Question Key Details :

Key	Value
Comprehension	MCQ

ਪੱਛਮੀ I ਅਤੇ ਪੱਛਮੀ II ਖ਼ਤਮ ਪੋਸ਼ਣਕ

ਪੱਛਮੀ I		ਪੱਛਮੀ II	
A.	ਨੀਲਗੰਡ ਦੀ ਅਲਗੂ	I.	ਸੁਰੱਖਿਅਕ ਫੀਮਿੱਟ
B.	ਨੀਲਗੰਡ ਦੀ ਅਲਗੂ	II.	ਲੀਪ ਆਂਡੂ
C.	ਨੀਲਗੰਡ ਦੀ ਅਲਗੂ	III.	ਪਾਰਸੇਕ
D.	ਨੀਲਗੰਡ ਦੀ ਅਲਗੂ	IV.	ਜੁਲ

ਕੋਈ ਖ਼ਤਮ ਪੋਸ਼ਣਕ ਵਾਲੇ ਖ਼ਤਮ ਪੋਸ਼ਣਕਾਂ ਵਿੱਚੋਂ ਸਹੀ ਉੱਤਰ ਚੁਣੋ:

1. A-I, B-II, C-III, D-IV
2. A-III, B-I, C-II, D-IV
3. A-I, B-III, C-IV, D-II
4. A-II, B-III, C-I, D-IV

Options :

485584146845. 1
485584146846. 2
485584146847. 3

485584146848. 4

Question Number : 77 Question Id : 48558436712 Question Type : MCQ Option Shuffling : No Is Question Mandatory : No Calculator : None Response Time : N.A Think Time : N.A Minimum Instruction Time : 0

Correct Marks : 5 Wrong Marks : 1

Question Key Details :

Key	Value
Comprehension	MCQ

జతపరచండి

జాబితా I		జాబితా II	
A.	పొడవు యొక్క యూనిట్	I.	చంద్రశేఖర్ లిమిట్
B.	ద్రవ్యరాశి యూనిట్	II.	లీప్ ఇయర్
C.	సమయం యూనిట్	III.	ఫార్ సెక్స్
D.	పని యూనిట్	IV.	జోల్

సరైన సమాధానం ఎన్నుకోండి.

1. A-I, B-II, C-III, D-IV
2. A-III, B-I, C-II, D-IV
3. A-I, B-III, C-IV, D-II
4. A-II, B-III, C-I, D-IV

Options :

485584146845. 1

485584146846. 2

485584146847. 3

485584146848. 4

Question Number : 77 Question Id : 48558436712 Question Type : MCQ Option Shuffling : No Is Question Mandatory : No Calculator : None Response Time : N.A Think Time : N.A Minimum Instruction Time : 0

Correct Marks : 5 Wrong Marks : 1

Question Key Details :

Key	Value
Comprehension	MCQ

فہرست II	فہرست I
I. چندر شیکھر لمیٹ	A. لمبائی کا یونٹ
II. لیپ سال	B. ماس کا یونٹ
III. پارمیٹک	C. وقت کا یونٹ
IV. جول	D. کام کا یونٹ

صحیح جواب چنیں :

1. A-I, B-II, C-III, D-IV

2. A-III, B-I, C-II, D-IV

3. A-I, B-III, C-IV, D-II

4. A-II, B-III, C-I, D-IV

Options :

485584146845. 1
485584146846. 2
485584146847. 3
485584146848. 4

Question Number : 78 Question Id : 48558436713 Question Type : MCQ Option Shuffling : No Is Question Mandatory : No Calculator : None Response Time : N.A Think Time : N.A Minimum Instruction Time : 0

Correct Marks : 5 Wrong Marks : 1

Question Key Details :

Key	Value
Comprehension	MCQ

Which of the following countries are proposed to be added to BRICS membership during the recently held BRICS summit :

1. Japan and Singapore
2. Iran and Argentina
3. Qatar and Turkey
4. Australia and New Zealand

Options :

485584146849. 1
485584146850. 2
485584146851. 3
485584146852. 4

Question Number : 78 Question Id : 48558436713 Question Type : MCQ Option Shuffling : No Is Question Mandatory : No Calculator : None Response Time : N.A Think Time : N.A Minimum Instruction Time : 0

Correct Marks : 5 Wrong Marks : 1

Question Key Details :

Key	Value
Comprehension	MCQ

हाल ही में हुए ब्रिक्स (BRICS) सम्मेलन में निम्न में से किन देशों का नाम ब्रिक्स के सदस्यों में सम्मिलित करने के लिए अनुमोदित किया गया:

1. जापान तथा सिंगापुर
2. ईरान तथा अर्जेंटीना
3. कतर तथा तुर्की
4. ऑस्ट्रेलिया तथा न्यूज़ीलैंड

Options :

485584146849. 1
485584146850. 2
485584146851. 3
485584146852. 4

Question Number : 78 Question Id : 48558436713 Question Type : MCQ Option Shuffling : No Is Question Mandatory : No Calculator : None Response Time : N.A Think Time : N.A Minimum Instruction Time : 0

Correct Marks : 5 Wrong Marks : 1

Question Key Details :

Key	Value
Comprehension	MCQ

শেহতীয়াভাৰে অনুষ্ঠিত BRICS অধিবেশনত BRICS সদস্যপদ দিবলৈ তলৰ কোনবোৰ দেশৰ নাম প্ৰস্তাৱ কৰা হৈছে?

1. জাপান আৰু ছিংগাপুৰ
2. ইৰান আৰু আৰ্জেণ্টিনা
3. কাটাৰ আৰু তুৰ্কী
4. অষ্ট্ৰেলিয়া আৰু নিউজিলেণ্ড

Options :

485584146849. 1
485584146850. 2
485584146851. 3

485584146852. 4

Question Number : 78 Question Id : 48558436713 Question Type : MCQ Option Shuffling : No Is Question Mandatory : No Calculator : None Response Time : N.A Think Time : N.A Minimum Instruction Time : 0

Correct Marks : 5 Wrong Marks : 1

Question Key Details :

Key	Value
Comprehension	MCQ

સામ્પ્રતિ અનુષ્ઠિત BRICS સન્મિલને કોન દેશગુલિકે BRICS સદસ્યપદ દેઁયાર પ્રસ્તાવ રાખા હયેછે।

1. જાપાન ંવં સિંગાપુર
2. ઈરાન ંવં આર્જેન્ટિના
3. કાતાર ંવં ટુર્કિ
4. ંસ્ટ્રેલિયા ંવં નિડરલેન્ડ

Options :

485584146849. 1
485584146850. 2
485584146851. 3
485584146852. 4

Question Number : 78 Question Id : 48558436713 Question Type : MCQ Option Shuffling : No Is Question Mandatory : No Calculator : None Response Time : N.A Think Time : N.A Minimum Instruction Time : 0

Correct Marks : 5 Wrong Marks : 1

Question Key Details :

Key	Value
Comprehension	MCQ

હાલમાં યોજાયેલ BRICS સમીટમાં નીચે આપેલ માંથી ક્યાં દેશો ને તેમા સમાવવા માટેનો પ્રસ્તાવ મૂકવામાં આવ્યો છે ?

1. જાપાન ંને સિંગાપુર
2. ઈરાન ંને અર્જન્ટીના
3. કતાર ંને ટર્કી
4. ંસ્ટ્રેલિયા ંને ન્યુ-ઝીલેન્ડ

Options :

485584146849. 1
485584146850. 2
485584146851. 3
485584146852. 4

Question Number : 78 Question Id : 48558436713 Question Type : MCQ Option Shuffling : No Is Question Mandatory : No Calculator : None Response Time : N.A Think Time : N.A Minimum Instruction Time : 0

Correct Marks : 5 Wrong Marks : 1

Question Key Details :

Key	Value
Comprehension	MCQ

ಇತ್ತೀಚೆಗೆ ನಡೆದ ಬ್ರಿಕ್ಸ್ ಶೃಂಗಸಭೆಯಲ್ಲಿ ಈ ಕೆಳಗಿನ ಯಾವ ರಾಷ್ಟ್ರಗಳನ್ನು ಬ್ರಿಕ್ಸ್ ಸದಸ್ಯರನ್ನಾಗಿ ಸೇರಿಸಲು ಪ್ರಸ್ತಾಪಿಸಲಾಗಿದೆ?

1. ಜಪಾನ್ ಮತ್ತು ಸಿಂಗಾಪುರ
2. ಇರಾನ್ ಮತ್ತು ಅರ್ಜೆಂಟೀನಾ
3. ಕತಾರ್ ಮತ್ತು ಟರ್ಕಿ
4. ಆಸ್ಟ್ರೇಲಿಯಾ ಮತ್ತು ನ್ಯೂಜಿಲ್ಯಾಂಡ್

Options :

485584146849. 1
485584146850. 2
485584146851. 3
485584146852. 4

Question Number : 78 Question Id : 48558436713 Question Type : MCQ Option Shuffling : No Is Question Mandatory : No Calculator : None Response Time : N.A Think Time : N.A Minimum Instruction Time : 0

Correct Marks : 5 Wrong Marks : 1

Question Key Details :

Key	Value
Comprehension	MCQ

ಉತ್ತರ ಅಕ್ಷಾಂಶದ 10ನೇ BRICS ಉಪಗ್ರಹದಲ್ಲಿ, ಪುನಃ BRICS ಉತ್ತರ ಅಕ್ಷಾಂಶದ ರಾಜ್ಯಗಳು ಏನು ?

1. ಜಪಾನ್ & ಸಿಂಗಾಪುರ
2. ಇರಾನ್ & ಅರ್ಜೆಂಟೀನಾ
3. ಕತಾರ್ & ಟರ್ಕಿ
4. ಆಸ್ಟ್ರೇಲಿಯ & ನ್ಯೂಜಿಲ್ಯಾಂಡ್

Options :

485584146849. 1
485584146850. 2
485584146851. 3
485584146852. 4

Question Number : 78 Question Id : 48558436713 Question Type : MCQ Option Shuffling : No Is Question Mandatory : No Calculator : None Response Time : N.A Think Time : N.A Minimum Instruction Time : 0

Correct Marks : 5 Wrong Marks : 1

Question Key Details :

Key	Value
-----	-------

नुकत्याच पार पडलेल्या BRICS शिखर परिषदेत खालीलपैकी कोणत्या देशांना BRICS चे सदस्यत्व देण्याचे प्रस्तावित करण्यात आले?

1. जपान आणि सिंगापूर
2. इराण आणि अर्जेन्टिना
3. कतार आणि तुर्की
4. ऑस्ट्रेलिया आणि न्यूझीलंड

Options :

485584146849. 1
485584146850. 2
485584146851. 3
485584146852. 4

Question Number : 78 Question Id : 48558436713 Question Type : MCQ Option Shuffling : No Is Question Mandatory : No Calculator : None Response Time : N.A Think Time : N.A Minimum Instruction Time : 0

Correct Marks : 5 Wrong Marks : 1

Question Key Details :

Key	Value
Comprehension	MCQ

BRICS (ब्रिक्स) वेवर्गमानक निकासरे खोजल्ल्या चूड्यात वेवंगरे निल्लु केडें वेवर्ग/वेवर्गमानक ब्रिक्सरे खल्लित हेवरा घालें प्रस्ताव रखायाल्ल्या?

1. Japan and Singapore
2. Iran and Argentina
3. Qatar and Turkey
4. Australia and New Zealand

Options :

485584146849. 1
485584146850. 2
485584146851. 3
485584146852. 4

Question Number : 78 Question Id : 48558436713 Question Type : MCQ Option Shuffling : No Is Question Mandatory : No Calculator : None Response Time : N.A Think Time : N.A Minimum Instruction Time : 0

Correct Marks : 5 Wrong Marks : 1

Question Key Details :

Key	Value
Comprehension	MCQ

ਹਾਲ ਹੀ ਵਿੱਚ ਆਯੋਜਿਤ ਬਰਿਕਸ ਸੰਮੇਲਨ ਦੌਰਾਨ ਹੇਠਾਂ ਦਿੱਤੇ ਦੇਸ਼ਾਂ ਵਿੱਚੋਂ ਕਿਸਨੂੰ ਬਰਿਕਸ ਮੈਂਬਰਸ਼ਿਪ (ਸਦੱਸਤਾ) ਵਿੱਚ ਸ਼ਾਮਲ ਕਰਨ ਦਾ ਪ੍ਰਸਤਾਵ ਹੈ?

1. ਜਾਪਾਨ ਅਤੇ ਸਿੰਗਾਪੁਰ
2. ਇਰਾਨ ਅਤੇ ਆਰਜੇਨਟਿਨਾ
3. ਕਾਤਾਰ ਅਤੇ ਤੁਰਕੀ
4. ਆਸਟ੍ਰੇਲੀਆਂ ਅਤੇ ਨਿਊਜ਼ੀਲੈਂਡ

Options :

485584146849. 1
485584146850. 2
485584146851. 3
485584146852. 4

Question Number : 78 Question Id : 48558436713 Question Type : MCQ Option Shuffling : No Is Question Mandatory : No Calculator : None Response Time : N.A Think Time : N.A Minimum Instruction Time : 0

Correct Marks : 5 Wrong Marks : 1

Question Key Details :

Key	Value
Comprehension	MCQ

ਸਮੀਪਤੀ ਨਦ ਨੁਤੁ ਮੁਢਿਨੁਤ BRICS ਕੂਟੁਦਮੇਪੁ ਮਾਨਾਡਿਲ ਪਿਨਵਰੁਮ ਨਾਡੁਕਲਿਲ ਈਵ BRICS ਊਰੁਪਿਨਰਕਲਾਕ ਸ਼ੇਰੁਤੁਕੁਕੋਲਾਗਲਪੁਡ ਵੇਨੁਨੁਡੁਮ ਈਨ ਮੁਨੁਮੋਮਾਝਿਪਪੁਡੁਤੁ?

1. ਝਪੁਪਾਨੁ ਮਹੁਰੁਮੁ ਸਿਨੁਕਪੁਪੁਰੁ
2. ਈਰਾਨੁ ਮਹੁਰੁਮੁ ਅਰੁਯੋਨੁਡਿਨਾ
3. ਕੁਤੁਤਾਰੁ ਮਹੁਰੁਮੁ ਤੁਰੁਕੁਕੁ
4. ਊਸੁਤੁਯੋਰੁਲਿਯਾ ਮਹੁਰੁਮੁ ਨਿਯੁਸਿਲਾਨੁਤੁ

Options :

485584146849. 1
485584146850. 2
485584146851. 3
485584146852. 4

Question Number : 78 Question Id : 48558436713 Question Type : MCQ Option Shuffling : No Is Question Mandatory : No Calculator : None Response Time : N.A Think Time : N.A Minimum Instruction Time : 0

Correct Marks : 5 Wrong Marks : 1

Question Key Details :

Key	Value
Comprehension	MCQ

ఇటీవల జరిగిన BRICS సమ్మిట్ సందర్భంగా BRICS సభ్యత్వానికి కింది వాటిలో ఏయే దేశాలను చేర్చాలని ప్రతిపాదించారు.

1. జపాన్ మరియు సింగపూర్
2. ఇరాన్ మరియు అరైంటినా
3. ఖతార్ మరియు టర్కీ
4. ఆస్ట్రేలియా మరియు న్యూజిలాండ్

Options :

485584146849. 1
485584146850. 2
485584146851. 3
485584146852. 4

Question Number : 78 Question Id : 48558436713 Question Type : MCQ Option Shuffling : No Is Question Mandatory : No Calculator : None Response Time : N.A Think Time : N.A Minimum Instruction Time : 0

Correct Marks : 5 Wrong Marks : 1

Question Key Details :

Key	Value
Comprehension	MCQ

حالیہ BRICS سمٹ میں، مندرجہ ذیل میں سے کون سے ملکوں کو شامل کرنے کی تجویز دی گئی؟

1. جاپان اور سنگاپور
2. ایران اور ارجنٹینا
3. قطر اور ترکی
4. آسٹریلیا اور نیوزیلینڈ

Options :

485584146849. 1
485584146850. 2
485584146851. 3
485584146852. 4

Question Number : 79 Question Id : 48558436714 Question Type : MCQ Option Shuffling : No Is Question Mandatory : No Calculator : None Response Time : N.A Think Time : N.A Minimum Instruction Time : 0

Correct Marks : 5 Wrong Marks : 1

Question Key Details :

Key	Value
Comprehension	MCQ

Match List I with List II

LIST I (Intelligence Agencies of the World)		LIST II (Country)	
A.	Naicho	I.	Iran
B.	SAVAK	II.	Israel
C.	MOSSAD	III.	Japan
D.	Mukhabarat	IV.	Egypt

Choose the correct answer from the options given below:

1. A-III, B-I, C-II, D-IV
2. A-IV, B-III, C-II, D-I
3. A-III, B-IV, C-II, D-I
4. A-I, B-III, C-II, D-IV

Options :

485584146853. 1
485584146854. 2
485584146855. 3
485584146856. 4

Question Number : 79 Question Id : 48558436714 Question Type : MCQ Option Shuffling : No Is Question Mandatory : No Calculator : None Response Time : N.A Think Time : N.A Minimum Instruction Time : 0

Correct Marks : 5 Wrong Marks : 1

Question Key Details :

Key	Value
Comprehension	MCQ

सूची I का मिलान सूची II से कीजिए

सूची I (दुनिया की खुफिया एजेंसीयां)		सूची II (देश)	
A.	नाइको	I.	इरान
B.	सावक	II.	इज्रायल
C.	मोसाद	III.	जापान
D.	मुखाबरत	IV.	मिस्र

नीचे दिए गए विकल्पों में से सही उत्तर का चयन कीजिए:

1. A-III, B-I, C-II, D-IV
2. A-IV, B-III, C-II, D-I
3. A-III, B-IV, C-II, D-I
4. A-I, B-III, C-II, D-IV

Options :

485584146853. 1
485584146854. 2
485584146855. 3
485584146856. 4

Question Number : 79 Question Id : 48558436714 Question Type : MCQ Option Shuffling : No Is Question Mandatory : No Calculator : None Response Time : N.A Think Time : N.A Minimum Instruction Time : 0

Correct Marks : 5 Wrong Marks : 1

Question Key Details :

Key	Value
Comprehension	MCQ

তালিকা I-ৰ সৈতে তালিকা II মিলোৱা

তালিকা I		তালিকা II	
A.	Naicho	I.	ইৰান
B.	SAVAK	II.	ইজৰাইল
C.	MOSSAD	III.	জাপান
D.	Mukhabarat	IV.	ইজিপ্ত

তলৰ বিকল্পসমূহৰপৰা শুদ্ধ উত্তৰটো বাছি উলিওৱা

1. A-III, B-I, C-II, D-IV
2. A-IV, B-III, C-II, D-I
3. A-III, B-IV, C-II, D-I
4. A-I, B-III, C-II, D-IV

Options :

485584146853. 1
 485584146854. 2
 485584146855. 3
 485584146856. 4

Question Number : 79 Question Id : 48558436714 Question Type : MCQ Option Shuffling : No Is Question Mandatory : No Calculator : None Response Time : N.A Think Time : N.A Minimum Instruction Time : 0

Correct Marks : 5 Wrong Marks : 1

Question Key Details :

Key	Value
Comprehension	MCQ

তালিকা I এর সাথে তালিকা II মেলাও

তালিকা I		তালিকা II	
A.	নাইচো	I.	ইরান
B.	সাভাক	II.	ইসরায়েল
C.	মোসাদ	III.	জাপান
D.	মুখবারাত	IV.	মিশর

নীচের বিকল্পগুলি থেকে সঠিক উত্তর চিহ্নিত কর:

1. A-III, B-I, C-II, D-IV
2. A-IV, B-III, C-II, D-I
3. A-III, B-IV, C-II, D-I
4. A-I, B-III, C-II, D-IV

Options :

485584146853. 1
 485584146854. 2
 485584146855. 3
 485584146856. 4

Question Number : 79 Question Id : 48558436714 Question Type : MCQ Option Shuffling : No Is Question Mandatory : No Calculator : None Response Time : N.A Think Time : N.A Minimum Instruction Time : 0

Correct Marks : 5 Wrong Marks : 1

Question Key Details :

Key	Value
Comprehension	MCQ

સૂચિ I ને સૂચિ II સાથે જોડો.

સૂચિ I માં આપેલ ઇન્ટેલીજન્ટ એજન્સી ને તેની સૂચિ II માં આપેલ યોગ્ય દેશ સાથે જોડો.

સૂચિ I		સૂચિ II	
A.	Naicho	I.	Iran
B.	SAVAK	II.	Israel
C.	MOSSAD	III.	Japan
D.	Mukhabarat	IV.	Egypt

નીચે આપેલા વિકલ્પોમાંથી સાચો જવાબ પસંદ કરો.

1. A-III, B-I, C-II, D-IV
2. A-IV, B-III, C-II, D-I
3. A-III, B-IV, C-II, D-I
4. A-I, B-III, C-II, D-IV

Options :

485584146853. 1
485584146854. 2
485584146855. 3
485584146856. 4

Question Number : 79 Question Id : 48558436714 Question Type : MCQ Option Shuffling : No Is Question Mandatory : No Calculator : None Response Time : N.A Think Time : N.A Minimum Instruction Time : 0

Correct Marks : 5 Wrong Marks : 1

Question Key Details :

Key	Value
Comprehension	MCQ

પટ્ટી I અನ್ನು પટ્ટી II ર જોડે તે હોંદીસી

પટ્ટી - I		પટ્ટી - II	
A.	નાયીઝો (Naicho)	I.	ઇરાન
B.	SAVAK	II.	ઇસ્રેલ
C.	MOSSAD	III.	જપાન
D.	મુખબારત	IV.	ઇજીપ્ત

કેલગે નીઢીરુવ ઓયુંગલેંદ સરિયાદ ઉત્તરવનુ ઓરિસી:

1. A-III, B-I, C-II, D-IV
2. A-IV, B-III, C-II, D-I
3. A-III, B-IV, C-II, D-I
4. A-I, B-III, C-II, D-IV

Options :

485584146853. 1
485584146854. 2
485584146855. 3
485584146856. 4

Question Number : 79 Question Id : 48558436714 Question Type : MCQ Option Shuffling : No Is Question Mandatory : No Calculator : None Response Time : N.A Think Time : N.A Minimum Instruction Time : 0

Correct Marks : 5 Wrong Marks : 1

Question Key Details :

Key	Value
Comprehension	MCQ

ചേരുംപടി ചേർക്കുക

പട്ടിക I		പട്ടിക II	
A.	നായ്ചോ	I.	ഇറാനി
B.	സവക്	II.	ഇസ്രായൽ
C.	മൊസാദ്		ജപ്പാനി
D.	മുഖാബരത്	IV.	ഇറജിപ്പ്

1. A-III, B-I, C-II, D-IV
2. A-IV, B-III, C-II, D-I
3. A-III, B-IV, C-II, D-I
4. A-I, B-III, C-II, D-IV

Options :

485584146853. 1
485584146854. 2
485584146855. 3
485584146856. 4

Question Number : 79 Question Id : 48558436714 Question Type : MCQ Option Shuffling : No Is Question Mandatory : No Calculator : None Response Time : N.A Think Time : N.A Minimum Instruction Time : 0

Correct Marks : 5 Wrong Marks : 1

Question Key Details :

Key	Value
Comprehension	MCQ

यादी I व यादी II जुळवा.

यादी I		यादी II	
A.	नायको	I.	इराण
B.	सवक	II.	इस्त्राईल
C.	मोसाद	III.	जपान
D.	मुखबरात	IV.	इजिप्त

खाली दिलेल्या पर्यायातून योग्य उत्तराची निवड करा.

1. A-III, B-I, C-II, D-IV
2. A-IV, B-III, C-II, D-I
3. A-III, B-IV, C-II, D-I
4. A-I, B-III, C-II, D-IV

Options :

485584146853. 1
485584146854. 2
485584146855. 3
485584146856. 4

Question Number : 79 Question Id : 48558436714 Question Type : MCQ Option Shuffling : No Is Question Mandatory : No Calculator : None Response Time : N.A Think Time : N.A Minimum Instruction Time : 0

Correct Marks : 5 Wrong Marks : 1

Question Key Details :

Key	Value
Comprehension	MCQ

ତାଲିକା I ସହିତ ତାଲିକା II କୁ ମିଳାନ୍ତୁ

ତାଲିକା I		ତାଲିକା II	
A.	ନାଇଚୋ (Naicho)	I.	ଇରାନ୍ (Iran)
B.	ସବକ (SAVAK)	II.	ଇସ୍ରାଏଲ (Israel)
C.	ମୋସାଡ଼ (MOSSAD)	III.	ଜାପାନ (Japan)
D.	ମୁଖବରତ (Mukhabarat)	IV.	ମିଶ୍ର (Egypt)

ନିମ୍ନ ବିକଳ୍ପ ଗୁଡ଼ିକରୁ ସଠିକ୍ ଉତ୍ତରଟି ଚିହ୍ନଟ କରନ୍ତୁ:

1. A-III, B-I, C-II, D-IV
2. A-IV, B-III, C-II, D-I
3. A-III, B-IV, C-II, D-I
4. A-I, B-III, C-II, D-IV

Options :

485584146853. 1

485584146854. 2

485584146855. 3

485584146856. 4

Question Number : 79 Question Id : 48558436714 Question Type : MCQ Option Shuffling : No Is Question Mandatory : No Calculator : None Response Time : N.A Think Time : N.A Minimum Instruction Time : 0

Correct Marks : 5 Wrong Marks : 1

Question Key Details :

Key	Value
Comprehension	MCQ

ਸੂਚੀ I ਦਾ ਸੂਚੀ II ਨਾਲ ਮਿਲਾਣ ਕਰੋ:

ਸੂਚੀ I		ਸੂਚੀ II	
A.	ਨੇਚੇ	I.	ਇਰਾਨ
B.	ਸਾਵਕ	II.	ਇਜ਼ਰਾਈਲ
C.	ਮਿਸਰ	III.	ਜਾਪਾਨ
D.	ਮੁਖਬਰਤ	IV.	ਮਿਸਰ

ਹੇਠਾਂ ਦਿੱਤੇ ਵਿਕਲਪਾਂ ਵਿੱਚੋਂ ਸਹੀ ਉੱਤਰ ਚੁਣੋ:

1. A-III, B-I, C-II, D-IV

2. A-IV, B-III, C-II, D-I

3. A-III, B-IV, C-II, D-I

4. A-I, B-III, C-II, D-IV

Options :

485584146853. 1

485584146854. 2

485584146855. 3

485584146856. 4

Question Number : 79 Question Id : 48558436714 Question Type : MCQ Option Shuffling : No Is Question Mandatory : No Calculator : None Response Time : N.A Think Time : N.A Minimum Instruction Time : 0

Correct Marks : 5 Wrong Marks : 1

Question Key Details :

Key	Value
Comprehension	MCQ

பட்டியல் I ஐ பட்டியல் II உடன் பொருத்துக

LIST I		LIST II	
A.	நைச்சோ	I.	ஈரான்
B.	சவக்	II.	இஸ்ரேல்
C.	மொசாத்	III.	ஜப்பான்
D.	முகாபாரத்	IV.	எகிப்து

கீழே தரப்பட்டுள்ள வாய்ப்புகளில் இருந்து சரியான விடையைத் தேர்ந்தெடுக்கவும்:

1. A-III, B-I, C-II, D-IV
2. A-IV, B-III, C-II, D-I
3. A-III, B-IV, C-II, D-I
4. A-I, B-III, C-II, D-IV

Options :

485584146853. 1
485584146854. 2
485584146855. 3
485584146856. 4

Question Number : 79 Question Id : 48558436714 Question Type : MCQ Option Shuffling : No Is Question Mandatory : No Calculator : None Response Time : N.A Think Time : N.A Minimum Instruction Time : 0

Correct Marks : 5 Wrong Marks : 1

Question Key Details :

Key	Value
Comprehension	MCQ

జతపరచండి

జాబితా I (గూఢాచార సంస్థలు)		జాబితా II (దేశాలు)	
A.	నెచో	I.	ఇరాన్
B.	SAVAK	II.	ఇజ్రాయిల్
C.	MOSSAD	III.	జపాన్
D.	ముక్కాబరత్	IV.	ఈజిప్ట్

సరైన సమాధానం ఎన్నుకోండి

1. A-III, B-I, C-II, D-IV
2. A-IV, B-III, C-II, D-I
3. A-III, B-IV, C-II, D-I
4. A-I, B-III, C-II, D-IV

Options :

485584146853. 1
485584146854. 2
485584146855. 3
485584146856. 4

Question Number : 79 Question Id : 48558436714 Question Type : MCQ Option Shuffling : No Is Question Mandatory : No Calculator : None Response Time : N.A Think Time : N.A Minimum Instruction Time : 0

Correct Marks : 5 Wrong Marks : 1

Question Key Details :

Key	Value
Comprehension	MCQ

فہرست I کو فہرست II سے ملائیں

فہرست II	فہرست I
I. ایران	Naicho A.
II. اسرائیل	SAVAK B.
III. جاپان	MOSSAD C.
IV. مصر	Mukhabarat D.

صحیح جواب چنیں :

1. A-III, B-I, C-II, D-IV
2. A-IV, B-III, C-II, D-I
3. A-III, B-IV, C-II, D-I
4. A-I, B-III, C-II, D-IV

Options :

485584146853. 1
485584146854. 2
485584146855. 3
485584146856. 4

Question Number : 80 Question Id : 48558436715 Question Type : MCQ Option Shuffling : No Is Question Mandatory : No Calculator : None Response Time : N.A Think Time : N.A Minimum Instruction Time : 0

Correct Marks : 5 Wrong Marks : 1

Question Key Details :

Key	Value
Comprehension	MCQ

NITI Aayog replaced the 'Planning Commission' in India, 'NITI' stands for :

1. National Institute for Transforming India
2. National Innovation & Transformation Institute
3. National Innovative & Technical Institute
4. National Implementation and Technical Institute

Options :

485584146857. 1
485584146858. 2
485584146859. 3
485584146860. 4

Question Number : 80 Question Id : 48558436715 Question Type : MCQ Option Shuffling : No Is Question Mandatory : No Calculator : None Response Time : N.A Think Time : N.A Minimum Instruction Time : 0

Correct Marks : 5 Wrong Marks : 1

Question Key Details :

Key	Value
Comprehension	MCQ

नीति आयोग ने भारत में योजना आयोग को प्रतिस्थापित किया, नीति (NITI) का अर्थ है-

1. नेशनल इंस्टीट्यूट फॉर ट्रांसफॉर्मिंग इंडिया
2. नेशनल इनोवेशन एंड ट्रांसफॉर्मेशन इंस्टीट्यूट
3. नेशनल इनोवेटिव एंड टेकनीकल इंस्टीट्यूट
4. नेशनल इम्प्लीमेंटेशन एंड टेकनिकल इंस्टीट्यूट

Options :

485584146857. 1
485584146858. 2
485584146859. 3
485584146860. 4

Question Number : 80 Question Id : 48558436715 Question Type : MCQ Option Shuffling : No Is Question Mandatory : No Calculator : None Response Time : N.A Think Time : N.A Minimum Instruction Time : 0

Correct Marks : 5 Wrong Marks : 1

Question Key Details :

Key	Value
Comprehension	MCQ

নিতি (NITI) আয়োগে ভাৰতৰ পৰিকল্পনা আয়োগৰ সলনি গঠিত কৰা হৈছে। 'NITI' মানে হ'ল :

1. নেচনেল ইনষ্টিটিউট ফৰ ট্ৰান্সফৰ্মিং ইণ্ডিয়া (National Institute for Transforming India)
2. নেচনেল ইন'ভেচন আৰু ট্ৰান্সফৰ্মেছন ইনষ্টিটিউট (National Innovation & Transformation Institute)
3. নেচনেল ইন'ভেটিভ আৰু টেকনিকেল ইনষ্টিটিউট (National Innovative & Technical Institute)
4. নেচনেল ইম্প্লিমেন্ট আৰু টেকনিকেল ইনষ্টিটিউট (National Implementation and Technical Institute)

Options :

485584146857. 1
485584146858. 2
485584146859. 3
485584146860. 4

Question Number : 80 Question Id : 48558436715 Question Type : MCQ Option Shuffling : No Is Question Mandatory : No Calculator : None Response Time : N.A Think Time : N.A Minimum Instruction Time : 0

Correct Marks : 5 Wrong Marks : 1

Question Key Details :

Key	Value
Comprehension	MCQ

পৰিকল্পনা কমিশ্বনৰ জায়গায় NITI আয়োগ গঠন কৰা হৈছে। 'NITI' এৰ মানেঃ

1. National Institute for Transforming India
2. National Innovation & Transformation Institute
3. National Innovative & Technical Institute
4. National Implementation and Technical Institute

Options :

485584146857. 1
485584146858. 2
485584146859. 3
485584146860. 4

Question Number : 80 Question Id : 48558436715 Question Type : MCQ Option Shuffling : No Is Question Mandatory : No Calculator : None Response Time : N.A Think Time : N.A Minimum Instruction Time : 0

Correct Marks : 5 Wrong Marks : 1

Question Key Details :

Key	Value
Comprehension	MCQ

ભારતમાં ધ્વાનિંગ કમિશનના સ્થાને NITI Aayog રચનામાં આપ્યું છે, જે નો અર્થ થાય છે કે :

1. National Institute for Transforming India
2. National Innovation & Transformation Institute
3. National Innovative & Technical Institute
4. National Implementation and Technical Institute

Options :

485584146857. 1
485584146858. 2
485584146859. 3
485584146860. 4

Question Number : 80 Question Id : 48558436715 Question Type : MCQ Option Shuffling : No Is Question Mandatory : No Calculator : None Response Time : N.A Think Time : N.A Minimum Instruction Time : 0

Correct Marks : 5 Wrong Marks : 1

Question Key Details :

Key	Value
Comprehension	MCQ

ಭારતದಲ್ಲಿ નીતિ (NITI) આયોગವು યોજના આયોગವನ್ನು બદલીસಿದೆ, નીતિ (NITI) સૂચીસુવુદુ
ಇદನ್ನು:

1. National Institute for Transforming India
2. National Innovation & Transformation Institute
3. National Innovative & Technical Institute
4. National Implementation and Technical Institute

Options :

485584146857. 1
485584146858. 2
485584146859. 3
485584146860. 4

Question Number : 80 Question Id : 48558436715 Question Type : MCQ Option Shuffling : No Is Question Mandatory : No Calculator : None Response Time : N.A Think Time : N.A Minimum Instruction Time : 0

Correct Marks : 5 Wrong Marks : 1

Question Key Details :

Key	Value
Comprehension	MCQ

ആസൂത്രണ കമ്മീഷനു പകരം വന്ന സ്ഥാപനമാണ് 'NITI' ആയോൾ . NITI എന്നാൽ?

1. National Institute for Transforming India
2. National Innovation & Transformation Institute
3. National Innovative & Technical Institute
4. National Implementation and Technical Institute

Options :

485584146857. 1
485584146858. 2
485584146859. 3
485584146860. 4

Question Number : 80 Question Id : 48558436715 Question Type : MCQ Option Shuffling : No Is Question Mandatory : No Calculator : None Response Time : N.A Think Time : N.A Minimum Instruction Time : 0

Correct Marks : 5 Wrong Marks : 1

Question Key Details :

Key	Value
Comprehension	MCQ

भारतातील नियोजन आयोगाच्या जागी निती आयोग आला. यातील (निती) NITI चे पूर्ण रूप -

1. नॅशनल इन्स्टिट्यूट फॉर ट्रान्सफॉर्मिंग इंडिया
2. नॅशनल इन्व्हेशन एण्ड ट्रान्सफॉर्मेशन इन्स्टिट्यूट
3. नॅशनल इनोव्हेटिव्ह एण्ड टेक्निकल इन्स्टिट्यूट
4. नॅशनल इम्पलिमेंटेशन अँड टेक्निकल इन्स्टिट्यूट

Options :

485584146857. 1
485584146858. 2
485584146859. 3
485584146860. 4

Question Number : 80 Question Id : 48558436715 Question Type : MCQ Option Shuffling : No Is Question Mandatory : No Calculator : None Response Time : N.A Think Time : N.A Minimum Instruction Time : 0

Correct Marks : 5 Wrong Marks : 1

Question Key Details :

Key	Value
Comprehension	MCQ

NITI ਆਯੋਗ ਭਾਰਤ ਦੇ "ਯੋਜਨਾ ਕਮਿਸ਼ਨ" ਨੂੰ ਬਦਲਿਆ ਜਾਵੇਗਾ (replaced), NITI ਨੂੰ ਸੰਪੂਰਨ ਕਰਨ ਦੀ ਉਮੀਦ ਕੀਤੀ ਜਾਂਦੀ ਹੈ?

1. National Institute for Transforming India
2. National Innovation & Transformation Institute
3. National Innovative & Technical Institute
4. National Implementation and Technical Institute

Options :

485584146857. 1
485584146858. 2
485584146859. 3
485584146860. 4

Question Number : 80 Question Id : 48558436715 Question Type : MCQ Option Shuffling : No Is Question Mandatory : No Calculator : None Response Time : N.A Think Time : N.A Minimum Instruction Time : 0

Correct Marks : 5 Wrong Marks : 1

Question Key Details :

Key	Value
Comprehension	MCQ

ਨੀਤੀ ਆਯੋਗ ਨੇ ਭਾਰਤ ਵਿੱਚ ਯੋਜਨਾ ਕਮਿਸ਼ਨ ਦੀ ਥਾਂ ਲੈ ਲਈ, ਨੀਤੀ ਦਾ ਅਰਥ ਹੈ?

1. ਰਾਸ਼ਟਰੀ ਸੰਸਥਾ ਭਾਰਤ ਦੇ ਰੂਪਾਂਤਰਨ ਲਈ
2. ਰਾਸ਼ਟਰੀ ਨਵੀਨਤਾ ਅਤੇ ਪਰਿਵਰਤਨ ਸੰਗਠਨ / ਸੰਸਥਾ
3. ਰਾਸ਼ਟਰੀ ਨਵੀਨਤਾਕਾਰੀ ਅਤੇ ਤਕਨੀਕੀ ਸੰਗਠਨ
4. ਰਾਸ਼ਟਰੀ ਲਾਗੂਕਰਨ ਅਤੇ ਤਕਨੀਕੀ ਸੰਗਠਨ

Options :

485584146857. 1
485584146858. 2
485584146859. 3
485584146860. 4

Question Number : 80 Question Id : 48558436715 Question Type : MCQ Option Shuffling : No Is Question Mandatory : No Calculator : None Response Time : N.A Think Time : N.A Minimum Instruction Time : 0

Correct Marks : 5 Wrong Marks : 1

Question Key Details :

Key	Value
Comprehension	MCQ

இந்தியாவில் 'திட்ட ஆணையத்திற்கு' (Planning Commission) பதிலாக 'நிதி ஆயோக்' (NITI Aayog) ஏற்படுத்தப்பட்டது. இதில் 'NITI' என்பது இதைக் குறிக்கிறது :

1. National Institute for Transforming India
2. National Innovation & Transformation Institute
3. National Innovative & Technical Institute
4. National Implementation and Technical Institute

Options :

485584146857. 1
485584146858. 2
485584146859. 3
485584146860. 4

Question Number : 80 Question Id : 48558436715 Question Type : MCQ Option Shuffling : No Is Question Mandatory : No Calculator : None Response Time : N.A Think Time : N.A Minimum Instruction Time : 0

Correct Marks : 5 Wrong Marks : 1

Question Key Details :

Key	Value
Comprehension	MCQ

భారతదేశంలో 'ప్రణాళిక సంఘం' స్థానంలో NITI ఆయోగ్ వచ్చింది. NITI అనగా :

1. నేషనల్ ఇన్స్టిట్యూట్ ఫర్ ట్రాన్స్ఫార్మింగ్ ఇండియా
2. నేషనల్ ఇన్నోవేషన్ అండ్ ట్రాన్స్ఫర్మేషన్ ఇన్స్టిట్యూట్
3. నేషనల్ ఇన్నోవేటివ్ అండ్ టెక్నికల్ ఇన్స్టిట్యూట్
4. నేషనల్ ఇంప్లెమెంటేషన్ అండ్ టెక్నికల్ ఇన్స్టిట్యూట్

Options :

485584146857. 1
485584146858. 2
485584146859. 3
485584146860. 4

Question Number : 80 Question Id : 48558436715 Question Type : MCQ Option Shuffling : No Is Question Mandatory : No Calculator : None Response Time : N.A Think Time : N.A Minimum Instruction Time : 0

Correct Marks : 5 Wrong Marks : 1

Question Key Details :

Key	Value
Comprehension	MCQ

نیتی آبیوگ (NITI Aayog) نے پلاننگ کمیٹن کو ہٹا کر جانشینی اختیار کی ہے۔ NITI سے کیا مراد ہے ؟

1. National Institute for Transforming India
2. National Innovation & Transformation Institute
3. National Innovative & Technical Institute
4. National Implementation and Technical Institute

Options :

485584146857. 1
485584146858. 2
485584146859. 3
485584146860. 4

Question Number : 81 Question Id : 48558436716 Question Type : MCQ Option Shuffling : No Is Question Mandatory : No Calculator : None Response Time : N.A Think Time : N.A Minimum Instruction Time : 0

Correct Marks : 5 Wrong Marks : 1

Question Key Details :

Key	Value
Comprehension	MCQ

Which one of the following is not the part of Atmosphere ?

1. Ionosphere
2. Stratosphere
3. Lithosphere
4. Troposphere

Options :

485584146861. 1
485584146862. 2
485584146863. 3
485584146864. 4

Question Number : 81 Question Id : 48558436716 Question Type : MCQ Option Shuffling : No Is Question Mandatory : No Calculator : None Response Time : N.A Think Time : N.A Minimum Instruction Time : 0

Correct Marks : 5 Wrong Marks : 1

Question Key Details :

Key	Value
Comprehension	MCQ

निम्न में से कौन सा वायुमंडल का भाग नहीं है:

1. आयनमंडल
2. समतापमंडल
3. स्थलमंडल
4. क्षीमंडल

Options :

485584146861. 1
485584146862. 2
485584146863. 3
485584146864. 4

Question Number : 81 Question Id : 48558436716 Question Type : MCQ Option Shuffling : No Is Question Mandatory : No Calculator : None Response Time : N.A Think Time : N.A Minimum Instruction Time : 0

Correct Marks : 5 Wrong Marks : 1

Question Key Details :

Key	Value
Comprehension	MCQ

তলৰ কোনটো বায়ুমণ্ডলৰ এটা অংশ নহয়?

1. আয়নস্ফিয়ার
2. স্ট্রেটস্ফিয়ার
3. লিথ'স্ফিয়ার
4. ট্ৰ'প'স্ফিয়ার

Options :

485584146861. 1
485584146862. 2
485584146863. 3
485584146864. 4

Question Number : 81 Question Id : 48558436716 Question Type : MCQ Option Shuffling : No Is Question Mandatory : No Calculator : None Response Time : N.A Think Time : N.A Minimum Instruction Time : 0

Correct Marks : 5 Wrong Marks : 1

Question Key Details :

Key	Value
Comprehension	MCQ

কোনটি বায়ুমণ্ডলের অংশ নয়?

1. আয়োনোস্ফিয়ার
2. স্ট্র্যাটোস্ফিয়ার
3. লিথোস্ফিয়ার
4. ট্রোপোস্ফিয়ার

Options :

485584146861. 1
485584146862. 2
485584146863. 3
485584146864. 4

Question Number : 81 Question Id : 48558436716 Question Type : MCQ Option Shuffling : No Is Question Mandatory : No Calculator : None Response Time : N.A Think Time : N.A Minimum Instruction Time : 0

Correct Marks : 5 Wrong Marks : 1

Question Key Details :

Key	Value
Comprehension	MCQ

নীচের কোনটি বায়ুমণ্ডলের অংশ নয় ?

1. আয়োনোস্ফিয়ার
2. স্ট্র্যাটোস্ফিয়ার
3. লিথোস্ফিয়ার
4. ট্রোপোস্ফিয়ার

Options :

485584146861. 1
485584146862. 2
485584146863. 3
485584146864. 4

Question Number : 81 Question Id : 48558436716 Question Type : MCQ Option Shuffling : No Is Question Mandatory : No Calculator : None Response Time : N.A Think Time : N.A Minimum Instruction Time : 0

Correct Marks : 5 Wrong Marks : 1

Question Key Details :

Key	Value
Comprehension	MCQ

ಕೆಳಗಿನವುಗಳಲ್ಲಿ ಯಾವುದು ವಾಯು ಮಂಡಲದ ಭಾಗವಲ್ಲ?

1. ಅಯಾನುಗೋಲ
2. ಸ್ವರಗೋಲ
3. ಶಿಲಾಗೋಳ
4. ಹವಾಗೋಲ

Options :

485584146861. 1
485584146862. 2
485584146863. 3
485584146864. 4

Question Number : 81 Question Id : 48558436716 Question Type : MCQ Option Shuffling : No Is Question Mandatory : No Calculator : None Response Time : N.A Think Time : N.A Minimum Instruction Time : 0

Correct Marks : 5 Wrong Marks : 1

Question Key Details :

Key	Value
Comprehension	MCQ

അന്തരീക്ഷത്തിന്റെ ഭാഗമല്ലാത്തത് ഏത് ?

1. അയനോസ്സിയർ
2. സ്ട്രാറ്റോസ്സിയർ
3. ലിതോസ്സിയർ
4. ട്രോപോസ്സിയർ

Options :

485584146861. 1
485584146862. 2
485584146863. 3
485584146864. 4

Question Number : 81 Question Id : 48558436716 Question Type : MCQ Option Shuffling : No Is Question Mandatory : No Calculator : None Response Time : N.A Think Time : N.A Minimum Instruction Time : 0

Correct Marks : 5 Wrong Marks : 1

Question Key Details :

Key	Value
Comprehension	MCQ

खालीलपैकी कोणता घटक हा वातावरणाचा भाग नाही?

1. लोनोस्फेअर
2. स्ट्रॅटोस्फेअर
3. लिथोस्फेअर
4. ट्रोपोस्फेअर

Options :

485584146861. 1
485584146862. 2
485584146863. 3
485584146864. 4

Question Number : 81 Question Id : 48558436716 Question Type : MCQ Option Shuffling : No Is Question Mandatory : No Calculator : None Response Time : N.A Think Time : N.A Minimum Instruction Time : 0

Correct Marks : 5 Wrong Marks : 1

Question Key Details :

Key	Value
Comprehension	MCQ

ନିମ୍ନରୁ କେଉଁଟି ବାୟୁମଣ୍ଡଳର ଅଂଶ ନୁହେଁ?

1. ଆୟୋନୋସ୍ଫିୟର (Ionosphere)
2. ସ୍ଟ୍ରୋଟୋସ୍ଫିୟର (Stratosphere)
3. ଲିଥୋସ୍ଫିୟର (Lithosphere)
4. ଟ୍ରୋପୋସ୍ଫିୟର (Troposphere)

Options :

485584146861. 1
485584146862. 2
485584146863. 3
485584146864. 4

Question Number : 81 Question Id : 48558436716 Question Type : MCQ Option Shuffling : No Is Question Mandatory : No Calculator : None Response Time : N.A Think Time : N.A Minimum Instruction Time : 0

Correct Marks : 5 Wrong Marks : 1

Question Key Details :

Key	Value
Comprehension	MCQ

ਹੇਠਾਂ ਲਿਖਿਆਂ ਵਿੱਚੋਂ ਕਿਹੜਾ ਵਾਯੂਮੰਡਲ ਦਾ ਹਿੱਸਾ ਨਹੀਂ ਹੈ?

1. ਆਈਨਮੰਡਲ
2. ਸਮਤਾਪ ਵਾਯੂਮੰਡਲ
3. ਲਿਥੋਸਫੇਅਰ
4. ਟ੍ਰੋਪੋਮੰਡਲ

Options :

485584146861. 1
485584146862. 2
485584146863. 3
485584146864. 4

Question Number : 81 Question Id : 48558436716 Question Type : MCQ Option Shuffling : No Is Question Mandatory : No Calculator : None Response Time : N.A Think Time : N.A Minimum Instruction Time : 0

Correct Marks : 5 Wrong Marks : 1

Question Key Details :

Key	Value
Comprehension	MCQ

ਪਿੰਨ੍ਹਵਰੁਵਨਵਹੁੰਨੁਗੁੰ ਗੁਗੁ ਵਗੁੰਮਠੁੰਡਲ ਅਠੁੰਕੁੰਕਿਲੁੰ ਅਮੈਮਯਾਗੁਗੁ ?

1. ਅਯਨੋਗੁੰਸੁਪਿਯਰੁੰ
2. ਗੁੰਡੁੰਗੁੰਗੁੰਡੋਗੁੰਸੁਪਿਯਰੁੰ
3. ਲਿਗੁੰਗੁੰਗੁੰਗੁੰਸੁਪਿਯਰੁੰ
4. ਗੁੰਗੁੰਗੁੰਗੁੰਗੁੰਗੁੰਸੁਪਿਯਰੁੰ

Options :

485584146861. 1
485584146862. 2
485584146863. 3
485584146864. 4

Question Number : 81 Question Id : 48558436716 Question Type : MCQ Option Shuffling : No Is Question Mandatory : No Calculator : None Response Time : N.A Think Time : N.A Minimum Instruction Time : 0

Correct Marks : 5 Wrong Marks : 1

Question Key Details :

Key	Value
Comprehension	MCQ

కింది వాటిలో ఏది వాతావరణం భాగం కాదు?

1. ఆయానోస్పియర్
2. స్ట్రాటోస్పియర్
3. లిథోస్పియర్
4. ట్రోపోస్పియర్

Options :

485584146861. 1
485584146862. 2
485584146863. 3
485584146864. 4

Question Number : 81 Question Id : 48558436716 Question Type : MCQ Option Shuffling : No Is Question Mandatory : No Calculator : None Response Time : N.A Think Time : N.A Minimum Instruction Time : 0

Correct Marks : 5 Wrong Marks : 1

Question Key Details :

Key	Value
Comprehension	MCQ

مندرجہ ذیل میں سے کون کڑہ ہوا کا حصہ نہیں ہے ؟

1. کڑہ برق بارہ
2. کڑہ قائمہ
3. کڑہ لہوسفینر
4. کڑہ متغیرہ

Options :

485584146861. 1
485584146862. 2
485584146863. 3
485584146864. 4

Question Number : 82 Question Id : 48558436717 Question Type : MCQ Option Shuffling : No Is Question Mandatory : No Calculator : None Response Time : N.A Think Time : N.A Minimum Instruction Time : 0

Correct Marks : 5 Wrong Marks : 1

Question Key Details :

Key	Value
Comprehension	MCQ

Himachal Pradesh shares boundary with :

1. Two Indian states
2. Three Indian states
3. Four Indian states
4. Five Indian states

Options :

485584146865. 1
485584146866. 2
485584146867. 3
485584146868. 4

Question Number : 82 Question Id : 48558436717 Question Type : MCQ Option Shuffling : No Is Question Mandatory : No Calculator : None Response Time : N.A Think Time : N.A Minimum Instruction Time : 0

Correct Marks : 5 Wrong Marks : 1

Question Key Details :

Key	Value
Comprehension	MCQ

हिमाचल प्रदेश की सीमाएँ _____ के साथ साझा होती है।

1. दो भारतीय राज्य
2. तीन भारतीय राज्य
3. चार भारतीय राज्य
4. पाँच भारतीय राज्य

Options :

485584146865. 1
485584146866. 2
485584146867. 3
485584146868. 4

Question Number : 82 Question Id : 48558436717 Question Type : MCQ Option Shuffling : No Is Question Mandatory : No Calculator : None Response Time : N.A Think Time : N.A Minimum Instruction Time : 0

Correct Marks : 5 Wrong Marks : 1

Question Key Details :

Key	Value
Comprehension	MCQ

হিমাচল প্ৰদেশৰ সীমা অন্য কাৰ কাৰ সীমাৰ লগত সংলগ্ন?

1. ভাৰতৰ দুখন ৰাজ্যৰ লগত
2. ভাৰতৰ তিনিখন ৰাজ্যৰ লগত
3. ভাৰতৰ চাৰিখন ৰাজ্যৰ লগত
4. ভাৰতৰ পাঁচখন ৰাজ্যৰ লগত

Options :

485584146865. 1
485584146866. 2
485584146867. 3
485584146868. 4

Question Number : 82 Question Id : 48558436717 Question Type : MCQ Option Shuffling : No Is Question Mandatory : No Calculator : None Response Time : N.A Think Time : N.A Minimum Instruction Time : 0

Correct Marks : 5 Wrong Marks : 1

Question Key Details :

Key	Value
Comprehension	MCQ

হিমাচল প্ৰদেশৰ সীমা স্পৰ্শ কৰে :

1. দুটো ভাৰতীয় ৰাজ্য
2. তিনিটি ভাৰতীয় ৰাজ্য
3. চাৰিটি ভাৰতীয় ৰাজ্য
4. পাঁচটি ভাৰতীয় ৰাজ্য

Options :

485584146865. 1
485584146866. 2
485584146867. 3
485584146868. 4

Question Number : 82 Question Id : 48558436717 Question Type : MCQ Option Shuffling : No Is Question Mandatory : No Calculator : None Response Time : N.A Think Time : N.A Minimum Instruction Time : 0

Correct Marks : 5 Wrong Marks : 1

Question Key Details :

Key	Value
Comprehension	MCQ

હિમાચલ પ્રદેશની સીમા કેટલા રાજ્ય સાથે જોડાયેલ છે ?

1. ભારતના બે રાજ્યો
2. ભારતના ત્રણ રાજ્યો
3. ભારતના ચાર રાજ્યો
4. ભારતના પાંચ રાજ્યો

Options :

485584146865. 1
485584146866. 2
485584146867. 3
485584146868. 4

Question Number : 82 Question Id : 48558436717 Question Type : MCQ Option Shuffling : No Is Question Mandatory : No Calculator : None Response Time : N.A Think Time : N.A Minimum Instruction Time : 0

Correct Marks : 5 Wrong Marks : 1

Question Key Details :

Key	Value
Comprehension	MCQ

હિમાચલ પ્રદેશવુ સરહદ્દન્નુ કંચીકેંડીરુવુદુ ઇદર જીએતેં

1. ભારતદ એરડુ રાજ્યગલુ
2. ભારતદ મુરુ રાજ્યગલુ
3. ભારતદ નાલુ રાજ્યગલુ
4. ભારતદ ઇદુ રાજ્યગલુ

Options :

485584146865. 1
485584146866. 2
485584146867. 3
485584146868. 4

Question Number : 82 Question Id : 48558436717 Question Type : MCQ Option Shuffling : No Is Question Mandatory : No Calculator : None Response Time : N.A Think Time : N.A Minimum Instruction Time : 0

Correct Marks : 5 Wrong Marks : 1

Question Key Details :

Key	Value
Comprehension	MCQ

ഹിമാചൽപ്രദേശ് എത്ര സംസ്ഥാനങ്ങളോടൊപ്പം അതിർ പങ്കിടുന്നു ?

1. 2

2. 3

3. 4

4. 5

Options :

485584146865. 1

485584146866. 2

485584146867. 3

485584146868. 4

Question Number : 82 Question Id : 48558436717 Question Type : MCQ Option Shuffling : No Is Question Mandatory : No Calculator : None Response Time : N.A Think Time : N.A Minimum Instruction Time : 0

Correct Marks : 5 Wrong Marks : 1

Question Key Details :

Key	Value
Comprehension	MCQ

हिमाचल प्रदेशची सीमारेषा यांच्याशी सामाईक आहे -

1. दोन भारतीय राज्ये

2. तीन भारतीय राज्ये

3. चार भारतीय राज्ये

4. पाच भारतीय राज्ये

Options :

485584146865. 1

485584146866. 2

485584146867. 3

485584146868. 4

Question Number : 82 Question Id : 48558436717 Question Type : MCQ Option Shuffling : No Is Question Mandatory : No Calculator : None Response Time : N.A Think Time : N.A Minimum Instruction Time : 0

Correct Marks : 5 Wrong Marks : 1

Question Key Details :

Key	Value
Comprehension	MCQ

ହିମାଚଳ ପ୍ରଦେଶ କାହା କାହା ସହିତ ସୀମାରେଖା ଆବଦ୍ଧ କରେ (shares boundary):

1. ଦୁଇଟି ଭାରତୀୟ ରାଜ୍ୟ
2. ତିନୋଟି ଭାରତୀୟ ରାଜ୍ୟ
3. ଚାରୋଟି ଭାରତୀୟ ରାଜ୍ୟ
4. ପାଞ୍ଚଟି ଭାରତୀୟ ରାଜ୍ୟ

Options :

485584146865. 1
485584146866. 2
485584146867. 3
485584146868. 4

Question Number : 82 Question Id : 48558436717 Question Type : MCQ Option Shuffling : No Is Question Mandatory : No Calculator : None Response Time : N.A Think Time : N.A Minimum Instruction Time : 0

Correct Marks : 5 Wrong Marks : 1

Question Key Details :

Key	Value
Comprehension	MCQ

ਹਿਮାਚਲ ਪ੍ਰਦੇਸ਼ ਸਰਹੱਦ ਸਾਂଝੀ ਕਰਦਾ ਹੈ -

1. ଦੋ ਭਾਰਤੀ ਰਾਜਾਂ ਨਾਲ
2. ਤਿੰਨ ਭਾਰਤੀ ਰਾਜਾਂ ਨਾਲ
3. ਚਾਰ ਭਾਰਤੀ ਰਾਜਾਂ ਨਾਲ
4. ਪੰਜ ਭਾਰਤੀ ਰਾਜਾਂ ਨਾਲ

Options :

485584146865. 1
485584146866. 2
485584146867. 3
485584146868. 4

Question Number : 82 Question Id : 48558436717 Question Type : MCQ Option Shuffling : No Is Question Mandatory : No Calculator : None Response Time : N.A Think Time : N.A Minimum Instruction Time : 0

Correct Marks : 5 Wrong Marks : 1

Question Key Details :

Key	Value
Comprehension	MCQ

ஹரிமாச்சல பிரதேசம் அதன் எல்லைகளை இவ்வாறு பகிர்ந்துகொள்கிறது :

1. இரண்டு இந்திய மாநிலங்களுடன்
2. மூன்று இந்திய மாநிலங்களுடன்
3. நான்கு இந்திய மாநிலங்களுடன்
4. ஐந்து இந்திய மாநிலங்களுடன்

Options :

485584146865. 1
485584146866. 2
485584146867. 3
485584146868. 4

Question Number : 82 Question Id : 48558436717 Question Type : MCQ Option Shuffling : No Is Question Mandatory : No Calculator : None Response Time : N.A Think Time : N.A Minimum Instruction Time : 0

Correct Marks : 5 Wrong Marks : 1

Question Key Details :

Key	Value
Comprehension	MCQ

హిమాచల్ ప్రదేశ్ వేటితో సరిహద్దును పంచుకుంటుంది:

1. రెండు భారత రాష్ట్రాలు
2. మూడు భారత రాష్ట్రాలు
3. నాలుగు భారత రాష్ట్రాలు
4. ఐదు భారత రాష్ట్రాలు

Options :

485584146865. 1
485584146866. 2
485584146867. 3
485584146868. 4

Question Number : 82 Question Id : 48558436717 Question Type : MCQ Option Shuffling : No Is Question Mandatory : No Calculator : None Response Time : N.A Think Time : N.A Minimum Instruction Time : 0

Correct Marks : 5 Wrong Marks : 1

Question Key Details :

Key	Value
Comprehension	MCQ

ہماچل پردیش کی سرحد کتنی ریاستوں سے ملتی ہے ؟

1. دو
2. تین
3. چار
4. پانچ

Options :

485584146865. 1
485584146866. 2
485584146867. 3
485584146868. 4

Question Number : 83 Question Id : 48558436718 Question Type : MCQ Option Shuffling : No Is Question Mandatory : No Calculator : None Response Time : N.A Think Time : N.A Minimum Instruction Time : 0

Correct Marks : 5 Wrong Marks : 1

Question Key Details :

Key	Value
Comprehension	MCQ

Match **List I** with **List II**

UNESCO Heritage sites in India

LIST I		LIST II	
A.	Elephanta Caves	I.	Odisha
B.	Sun Temple, Konark	II.	M.P
C.	Sanchi Stupa	III.	Maharashtra
D.	Fatehpur Sikri	IV.	Uttar Pradesh

Choose the correct answer from the options given below:

1. A-III, B-I, C-II, D-IV
2. A-I, B-III, C-IV, D-II
3. A-II, B-III, C-IV, D-I
4. A-I, B-II, C-IV, D-III

Options :

485584146869. 1
485584146870. 2
485584146871. 3
485584146872. 4

Question Number : 83 Question Id : 48558436718 Question Type : MCQ Option Shuffling : No Is Question Mandatory : No Calculator : None Response Time : N.A Think Time : N.A Minimum Instruction Time : 0

Correct Marks : 5 Wrong Marks : 1

Question Key Details :

Key	Value
Comprehension	MCQ

सूची I का मिलान सूची II से कीजिए

भारत में यूनेस्को द्वारा मान्य धरोहर स्थल

सूची I		सूची II	
A.	एलीफंटा गुफाएँ	I.	ओडिशा
B.	सूर्य मंदिर, कोणार्क	II.	एम.पी.
C.	सांची स्तूप	III.	महाराष्ट्र
D.	फतेहपुर सिकरी	IV.	उत्तर प्रदेश

नीचे दिए गए विकल्पों में से सही उत्तर का चयन कीजिए:

1. A-III, B-I, C-II, D-IV
2. A-I, B-III, C-IV, D-II
3. A-II, B-III, C-IV, D-I
4. A-I, B-II, C-IV, D-III

Options :

485584146869. 1
485584146870. 2
485584146871. 3
485584146872. 4

Question Number : 83 Question Id : 48558436718 Question Type : MCQ Option Shuffling : No Is Question Mandatory : No Calculator : None Response Time : N.A Think Time : N.A Minimum Instruction Time : 0

Correct Marks : 5 Wrong Marks : 1

Question Key Details :

Key	Value
Comprehension	MCQ

তালিকা I-ৰ সৈতে তালিকা II মিলোৱা

(UNESCO ৰদ্বাৰা ঘোষিত ভাৰতৰ ঐতিহ্যমণ্ডিত স্থানবোৰৰ সিবোৰৰ সংশ্লিষ্ট ৰাজ্যৰ লগত মিলোৱা)

তালিকা I		তালিকা II	
A.	এলিফেণ্টা গুহা	I.	উৰিষ্যা
B.	সূৰ্য মন্দিৰ	II.	মধ্য প্ৰদেশ
C.	সাঁচী স্তূপ	III.	মহাৰাষ্ট্ৰ
D.	ফটেহপুৰ চিক্ৰী	IV.	উত্তৰ প্ৰদেশ

তলৰ বিকল্পসমূহৰপৰা শুদ্ধ উত্তৰটো বাছি উলিওৱা

1. A-III, B-I, C-II, D-IV
2. A-I, B-III, C-IV, D-II
3. A-II, B-III, C-IV, D-I
4. A-I, B-II, C-IV, D-III

Options :

485584146869. 1
485584146870. 2
485584146871. 3
485584146872. 4

Question Number : 83 Question Id : 48558436718 Question Type : MCQ Option Shuffling : No Is Question Mandatory : No Calculator : None Response Time : N.A Think Time : N.A Minimum Instruction Time : 0

Correct Marks : 5 Wrong Marks : 1

Question Key Details :

Key	Value
Comprehension	MCQ

তালিকা I এর সাথে তালিকা II মেলাও

UNESCO দ্বারা স্বীকৃত ভারতের ঐতিহ্যবাহী স্থান

তালিকা I		তালিকা II	
A.	এলিফ্যান্টা কেভস	I.	ওড়িশা
B.	সূর্যমন্দির কোনারক	II.	মধ্য প্রদেশ
C.	সাঁচি স্তূপ	III.	মহারাষ্ট্র
D.	ফতেপু শিকরী	IV.	উত্তর প্রদেশ

নীচের বিকল্পগুলি থেকে সঠিক উত্তর চিহ্নিত কর:

1. A-III, B-I, C-II, D-IV
2. A-I, B-III, C-IV, D-II
3. A-II, B-III, C-IV, D-I
4. A-I, B-II, C-IV, D-III

Options :

485584146869. 1
485584146870. 2
485584146871. 3
485584146872. 4

Question Number : 83 Question Id : 48558436718 Question Type : MCQ Option Shuffling : No Is Question Mandatory : No Calculator : None Response Time : N.A Think Time : N.A Minimum Instruction Time : 0

Correct Marks : 5 Wrong Marks : 1

Question Key Details :

Key	Value
Comprehension	MCQ

সূচি I মাং ভারতমাং আবেল UNESCO ডেরীটেজ সাইটস ঙে জে সূচি II মাং আপেল যোগ্য রাজ্য সাথে জেডি.

সূচি I		সূচি II	
A.	এলিফ্যান্টা গুফাখী	I.	ওড়িশা
B.	সূর্যমন্দির, কোনারক	II.	মধ্য প্রদেশ
C.	সাঁচি স্তূপ	III.	মহারাষ্ট্র
D.	ফতেপু শিকরী	IV.	উত্তর প্রদেশ

নীচে আপেবা বিকল্যোমাংথী সাযো জবায পসংদ ক্রো.

1. A-III, B-I, C-II, D-IV
2. A-I, B-III, C-IV, D-II
3. A-II, B-III, C-IV, D-I
4. A-I, B-II, C-IV, D-III

Options :

485584146869. 1
485584146870. 2
485584146871. 3
485584146872. 4

Question Number : 83 Question Id : 48558436718 Question Type : MCQ Option Shuffling : No Is Question Mandatory : No Calculator : None Response Time : N.A Think Time : N.A Minimum Instruction Time : 0

Correct Marks : 5 Wrong Marks : 1

Question Key Details :

Key	Value
Comprehension	MCQ

ಪಟ್ಟಿ I ಅನ್ನು ಪಟ್ಟಿ IIರ ಜೊತೆ ಹೊಂದಿಸಿ:

ಪಟ್ಟಿ - I ಭಾರತದಲ್ಲಿ UNESCO ಪಾರಂಪರಿಕ ತಾಣಗಳು		ಪಟ್ಟಿ - II ರಾಜ್ಯಗಳು	
A.	ಎಲೆಫೆಂಟಾ ಗುಹೆಗಳು	I.	ಒಡಿಶಾ
B.	ಕೋನಾರ್ಕ್‌ನ ಸೂರ್ಯ ದೇವಾಲಯ	II.	ಮಧ್ಯಪ್ರದೇಶ
C.	ಸಾಂಚಿ ಸ್ತೂಪ	III.	ಮಹಾರಾಷ್ಟ್ರ
D.	ಫತೇಪುರ್ ಸಿಕ್ರಿ	IV.	ಉತ್ತರ ಪ್ರದೇಶ

ಕೆಳಗೆ ನೀಡಿರುವ ಆಯ್ಕೆಗಳಿಂದ ಸರಿಯಾದ ಉತ್ತರವನ್ನು ಆರಿಸಿ:

1. A-III, B-I, C-II, D-IV
2. A-I, B-III, C-IV, D-II
3. A-II, B-III, C-IV, D-I
4. A-I, B-II, C-IV, D-III

Options :

485584146869. 1
485584146870. 2
485584146871. 3
485584146872. 4

Question Number : 83 Question Id : 48558436718 Question Type : MCQ Option Shuffling : No Is Question Mandatory : No Calculator : None Response Time : N.A Think Time : N.A Minimum Instruction Time : 0

Correct Marks : 5 Wrong Marks : 1

Question Key Details :

Key	Value
Comprehension	MCQ

ചേരുംപടി ചേർക്കുക

UNESCO യുടെ പൈതൃക പട്ടികയിൽ പെടുത്തിയ ഇന്ത്യയിലെ സ്ഥലങ്ങൾ

പട്ടിക I		പട്ടിക II	
A.	എലിഫന്റേ കേവ്സ്	I.	ഒഡീഷ
B.	സൂര്യ ക്ഷേത്രം, കൊണാർക്ക്	II.	M.P
C.	സന്ദിഗ്ദ്ധപാ	III.	മഹാരാഷ്ട്ര
D.	ഫത്തേപ്പൂർ സിക്രി	IV.	ഉത്തർപ്രദേശ്

1. A-III, B-I, C-II, D-IV
2. A-I, B-III, C-IV, D-II
3. A-II, B-III, C-IV, D-I
4. A-I, B-II, C-IV, D-III

Options :

485584146869. 1
485584146870. 2
485584146871. 3
485584146872. 4

Question Number : 83 Question Id : 48558436718 Question Type : MCQ Option Shuffling : No Is Question Mandatory : No Calculator : None Response Time : N.A Think Time : N.A Minimum Instruction Time : 0

Correct Marks : 5 Wrong Marks : 1

Question Key Details :

Key	Value
Comprehension	MCQ

यादी I व यादी II जुळवा.

यादी I		यादी II	
A.	अलिफंटा लेणी	I.	ओडिसा
B.	सूर्य मंदिर, कोणार्क	II.	मध्य प्रदेश
C.	सांची स्तूप	III.	महाराष्ट्र
D.	फतेहपूर सिक्री	IV.	उत्तर प्रदेश

खाली दिलेल्या पर्यायांतून योग्य उत्तराची निवड करा.

1. A-III, B-I, C-II, D-IV
2. A-I, B-III, C-IV, D-II
3. A-II, B-III, C-IV, D-I
4. A-I, B-II, C-IV, D-III

Options :

485584146869. 1
485584146870. 2
485584146871. 3
485584146872. 4

Question Number : 83 Question Id : 48558436718 Question Type : MCQ Option Shuffling : No Is Question Mandatory : No Calculator : None Response Time : N.A Think Time : N.A Minimum Instruction Time : 0

Correct Marks : 5 Wrong Marks : 1

Question Key Details :

Key	Value
Comprehension	MCQ

ତାଲିକା I ସହିତ ତାଲିକା II କୁ ମିଳାନ୍ତୁ

ଭାରତରେ ଯୁନେସ୍କୋ ଐତିହ୍ୟ ସ୍ଥାନମାନେ

ତାଲିକା I		ତାଲିକା II	
A.	ଏଲିଫେଣ୍ଟ ଗୁମ୍ଫା	I.	ଓଡ଼ିଶା
B.	ସୂର୍ଯ୍ୟ ମନ୍ଦିର, କୋଣାର୍କ	II.	ଏମ୍.ପି
C.	ସାଞ୍ଚି ଖୁପ	III.	ମହାରାଷ୍ଟ୍ର
D.	ଫତେପୁର ସିକ୍ରି	IV.	ଭରର ପ୍ରଦେଶ

ନିମ୍ନ ବିକଳ୍ପ ଗୁଡ଼ିକରୁ ସଠିକ୍ ଉତ୍ତରଟି ଚିହ୍ନଟ କରନ୍ତୁ:

1. A-III, B-I, C-II, D-IV
2. A-I, B-III, C-IV, D-II
3. A-II, B-III, C-IV, D-I
4. A-I, B-II, C-IV, D-III

Options :

485584146869. 1
485584146870. 2
485584146871. 3
485584146872. 4

Question Number : 83 Question Id : 48558436718 Question Type : MCQ Option Shuffling : No Is Question Mandatory : No Calculator : None Response Time : N.A Think Time : N.A Minimum Instruction Time : 0

Correct Marks : 5 Wrong Marks : 1

Question Key Details :

Key	Value
Comprehension	MCQ

ਸੂਚੀ I ਦਾ ਸੂਚੀ II ਨਾਲ ਮਿਲਾਣ ਕਰੋ:

ਭਾਰਤ ਵਿੱਚ ਯੂਨੈਸਕੋ ਵਿਰਾਸਤੀ ਸਥਾਨ ਹੈ?

ਸੂਚੀ I		ਸੂਚੀ II	
A.	ਐਲੀਫੰਟਾ ਗੁਫਾ	I.	ਉੜੀਸਾ
B.	ਸੂਰਜ ਮੰਦਰ, ਕੋਠਾਰਕ	II.	ਐਮ. ਪੀ.
C.	ਸਾਂਚੀ ਸਤੂਪ	III.	ਮਹਾਰਾਸ਼ਟਰ
D.	ਫਤਿਹਪੁਰ ਸੀਕਰੀ	IV.	ਉੱਤਰ ਪ੍ਰਦੇਸ਼

ਹੇਠਾਂ ਦਿੱਤੇ ਵਿਕਲਪਾਂ ਵਿੱਚੋਂ ਸਹੀ ਉੱਤਰ ਚੁਣੋ:

1. A-III, B-I, C-II, D-IV
2. A-I, B-III, C-IV, D-II
3. A-II, B-III, C-IV, D-I
4. A-I, B-II, C-IV, D-III

Options :

485584146869. 1
485584146870. 2
485584146871. 3
485584146872. 4

Question Number : 83 Question Id : 48558436718 Question Type : MCQ Option Shuffling : No Is Question Mandatory : No Calculator : None Response Time : N.A Think Time : N.A Minimum Instruction Time : 0

Correct Marks : 5 Wrong Marks : 1

Question Key Details :

Key	Value
Comprehension	MCQ

ਪੱਛਮੀ I ਅਤੇ ਪੱਛਮੀ II ਖੇਤਰਾਂ ਨੂੰ ਮਿਲਾਉਣ

ਇੰਡੀਆ ਵਿੱਚ ਉੱਚੇ ਯੂਨੈਸਕੋ ਵਿਰਾਸਤੀ ਸਥਾਨਾਂ (UNESCO Heritage sites)

ਪੱਛਮੀ I		ਪੱਛਮੀ II	
A.	ਯਾਨਾਈਕ ਕੁਠਾਰਕ	I.	ਓੜੀਸਾ
B.	ਜ਼ਰੀਯਨ ਕੋਠਾਰਕ, ਕੋਠਾਰਕ	II.	ਮੱਠੀਯ ਪਿਰਠੇਸ਼ਮ
C.	ਸਾਂਚੀ ਸਤੂਪ	III.	ਮਹਾਰਾਸ਼ਟਰ
D.	ਪਠੇਕਪੁਰ ਸਿਕਰੀ	IV.	ਉੱਤਰ ਪ੍ਰਦੇਸ਼

ਠੀਕ ਤਰ੍ਹਾਂ ਪੱਛਮੀ I ਅਤੇ ਪੱਛਮੀ II ਨੂੰ ਮਿਲਾਉਣ

1. A-III, B-I, C-II, D-IV
2. A-I, B-III, C-IV, D-II
3. A-II, B-III, C-IV, D-I
4. A-I, B-II, C-IV, D-III

Options :

- 485584146869. 1
- 485584146870. 2
- 485584146871. 3
- 485584146872. 4

Question Number : 83 Question Id : 48558436718 Question Type : MCQ Option Shuffling : No Is Question Mandatory : No Calculator : None Response Time : N.A Think Time : N.A Minimum Instruction Time : 0

Correct Marks : 5 Wrong Marks : 1

Question Key Details :

Key	Value
Comprehension	MCQ

జతపరచండి

ఇండియాలో UNESCO వారసత్వ ప్రదేశాలు

జాబితా I		జాబితా II	
A.	ఎలిఫంటా గుహలు	I.	ఒడిశా
B.	సూర్యదేవాలయం, కోణార్క	II.	మధ్యప్రదేశ్
C.	సంచి స్థూప	III.	మహారాష్ట్ర
D.	ఫతేపూర్ సిక్రీ	IV.	ఉత్తరప్రదేశ్

సరైన సమాధానం ఎన్నుకోండి

1. A-III, B-I, C-II, D-IV
2. A-I, B-III, C-IV, D-II
3. A-II, B-III, C-IV, D-I
4. A-I, B-II, C-IV, D-III

Options :

- 485584146869. 1
- 485584146870. 2
- 485584146871. 3
- 485584146872. 4

Question Number : 83 Question Id : 48558436718 Question Type : MCQ Option Shuffling : No Is Question Mandatory : No Calculator : None Response Time : N.A Think Time : N.A Minimum Instruction Time : 0

Correct Marks : 5 Wrong Marks : 1

Question Key Details :

Key	Value
Comprehension	MCQ

فہرست I کو فہرست II سے ملائیں

ہندوستان میں یونیسکو کی وراثتی جگہیں :

فہرست II	فہرست I
I. اڑیسا	A. Elephanta Caves
II. مدھیا پردیش	B. Sun Temple, Konark
III. مہاراشٹرا	C. سانچی سٹوپا
IV. اترپردیش	D. فتح پور سیکری

صحیح جواب چلیں :

1. A-III, B-I, C-II, D-IV

2. A-I, B-III, C-IV, D-II

3. A-II, B-III, C-IV, D-I

4. A-I, B-II, C-IV, D-III

Options :

485584146869. 1

485584146870. 2

485584146871. 3

485584146872. 4

Question Number : 84 Question Id : 48558436719 Question Type : MCQ Option Shuffling : No Is Question Mandatory : No Calculator : None Response Time : N.A Think Time : N.A Minimum Instruction Time : 0

Correct Marks : 5 Wrong Marks : 1

Question Key Details :

Key	Value
Comprehension	MCQ

Match List I with List II

LIST I (Major volcanoes of the world)		LIST II (Places)	
A.	Mt. etna	I.	Tanzania
B.	Kilimanjaro	II.	Equador
C.	Cotopaxi	III.	California (US)
D.	Mt. Shasta	IV.	Sisily, Italy

Choose the correct answer from the options given below:

1. A-IV, B-I, C-II, D-III
2. A-I, B-II, C-IV, D-III
3. A-III, B-II, C-IV, D-I
4. A-IV, B-III, C-II, D-I

Options :

485584146873. 1
485584146874. 2
485584146875. 3
485584146876. 4

Question Number : 84 Question Id : 48558436719 Question Type : MCQ Option Shuffling : No Is Question Mandatory : No Calculator : None Response Time : N.A Think Time : N.A Minimum Instruction Time : 0

Correct Marks : 5 Wrong Marks : 1

Question Key Details :

Key	Value
Comprehension	MCQ

सूची I का मिलान सूची II से कीजिए

सूची I (विश्व की प्रमुख ज्वालामुखी)	सूची II (जगह)
A. माउंट एटना	I. तंजानिया
B. किलिमंजारो	II. इक्यूडर
C. कोटोपैक्सी	III. कैलीफोर्निया (यू.एस.)
D. माउंट शास्ता	IV. सिसिली, इटली

नीचे दिए गए विकल्पों में से सही उत्तर का चयन कीजिए:

1. A-IV, B-I, C-II, D-III
2. A-I, B-II, C-IV, D-III
3. A-III, B-II, C-IV, D-I
4. A-IV, B-III, C-II, D-I

Options :

485584146873. 1

485584146874. 2

485584146875. 3

485584146876. 4

Question Number : 84 Question Id : 48558436719 Question Type : MCQ Option Shuffling : No Is Question Mandatory : No Calculator : None Response Time : N.A Think Time : N.A Minimum Instruction Time : 0

Correct Marks : 5 Wrong Marks : 1

Question Key Details :

Key	Value
Comprehension	MCQ

তালিকা I-ৰ সৈতে তালিকা II মিলোৱা

তালিকা I (বিশ্বৰ প্ৰধান জ্বালামুখীবোৰ)		তালিকা II (সংশ্লিষ্ট স্থান)	
A.	মাউণ্ট এটনা	I.	টানজানিয়া
B.	কিলিমাঞ্জাৰো	II.	ইকুৱেডৰ
C.	কোটোপাক্সি	III.	কেলিফৰ্ণিয়া (আমেৰিকা)
D.	মাউণ্ট শাস্তা	IV.	ছিছিলা, ইটালী

তলৰ বিকল্পসমূহৰপৰা শুদ্ধ উত্তৰটো বাছি উলিওৱা:

1. A-IV, B-I, C-II, D-III
2. A-I, B-II, C-IV, D-III
3. A-III, B-II, C-IV, D-I
4. A-IV, B-III, C-II, D-I

Options :

485584146873. 1
485584146874. 2
485584146875. 3
485584146876. 4

Question Number : 84 Question Id : 48558436719 Question Type : MCQ Option Shuffling : No Is Question Mandatory : No Calculator : None Response Time : N.A Think Time : N.A Minimum Instruction Time : 0

Correct Marks : 5 Wrong Marks : 1

Question Key Details :

Key	Value
Comprehension	MCQ

তালিকা I ৰ সৈতে তালিকা II মিলোৱা

তালিকা I		তালিকা II	
A.	এটনা	I.	তানজানিয়া
B.	কিলিমানজাৰো	II.	ইকুৱেডৰ
C.	কোটোপাক্সি	III.	ক্যালিফৰ্ণিয়া
D.	মাউণ্ট শাস্তা	IV.	শিশিলা, ইটালী

নীচৰ বিকল্পসমূহৰপৰা শুদ্ধ উত্তৰ চিহ্নিত কৰ:

1. A-IV, B-I, C-II, D-III
2. A-I, B-II, C-IV, D-III
3. A-III, B-II, C-IV, D-I
4. A-IV, B-III, C-II, D-I

Options :

485584146873. 1
485584146874. 2
485584146875. 3
485584146876. 4

Question Number : 84 Question Id : 48558436719 Question Type : MCQ Option Shuffling : No Is Question Mandatory : No Calculator : None Response Time : N.A Think Time : N.A Minimum Instruction Time : 0

Correct Marks : 5 Wrong Marks : 1

Question Key Details :

Key	Value
Comprehension	MCQ

સૂચિ I માં આપેલ વિધમાં આવેલ જ્વાળામૂખી છે તેને સૂચિ II માં જે તે દેશમાં આવેલ હોય તેમ જોડો.

સૂચિ I		સૂચિ II	
A.	Mt. etna	I.	Tanzania
B.	Kilimanjaro	II.	Equador
C.	Cotopaxi	III.	California (US)
D.	Mt. Shasta	IV.	Sisily, Italy

નીચે આપેલા વિકલ્પોમાંથી સાચો જવાબ પસંદ કરો.

1. A-IV, B-I, C-II, D-III
2. A-I, B-II, C-IV, D-III
3. A-III, B-II, C-IV, D-I
4. A-IV, B-III, C-II, D-I

Options :

485584146873. 1
485584146874. 2
485584146875. 3
485584146876. 4

Question Number : 84 Question Id : 48558436719 Question Type : MCQ Option Shuffling : No Is Question Mandatory : No Calculator : None Response Time : N.A Think Time : N.A Minimum Instruction Time : 0

Correct Marks : 5 Wrong Marks : 1

Question Key Details :

Key	Value
Comprehension	MCQ

ಪಟ್ಟಿ I ಅನ್ನು ಪಟ್ಟಿ IIರ ಜೊತೆ ಹೊಂದಿಸಿ:

ಪಟ್ಟಿ - I		ಪಟ್ಟಿ - II	
A.	ಮೌಂಟ್ ಎಟ್ಸ್	I.	ತಾಂಜಾನಿಯ
B.	ಕಿಲಿಮಂಜರೋ	II.	ಇಕ್ವಡಾರ್
C.	ಕೊಟೊಪಾಕ್ವಿ	III.	ಕ್ಯಾಲಿಫೋರ್ನಿಯಾ (US)
D.	ಮೌಂಟ್ ಶಾಸ್ವ	IV.	ಸಿಸಿಲಿ, ಇಟಲಿ

ಕೆಳಗೆ ನೀಡಿರುವ ಆಯ್ಕೆಗಳಿಂದ ಸರಿಯಾದ ಉತ್ತರವನ್ನು ಆರಿಸಿ:

1. A-IV, B-I, C-II, D-III
2. A-I, B-II, C-IV, D-III
3. A-III, B-II, C-IV, D-I
4. A-IV, B-III, C-II, D-I

Options :

485584146873. 1
485584146874. 2
485584146875. 3
485584146876. 4

Question Number : 84 Question Id : 48558436719 Question Type : MCQ Option Shuffling : No Is Question Mandatory : No Calculator : None Response Time : N.A Think Time : N.A Minimum Instruction Time : 0

Correct Marks : 5 Wrong Marks : 1

Question Key Details :

Key	Value
Comprehension	MCQ

ಚೊರಂಪವಿ ಚೊರಿಕ್ಕುಕ

ಪಟ್ಟಿ I		ಪಟ್ಟಿ II	
A.	Mt. എറ്റ്ನ	I.	താൻസാനിയ
B.	കിളിമൻജಾರോ	II.	ഇക്വഡോർ
C.	കോട്ടോപാക്ವಿ	III.	കാലിഫോർണിയ
D.	Mt. ശസ്വ	IV.	സിസിലി, ഇറ്റലി

തന്നിട്ടുള്ളവയിൽ നിന്ന് ശരിയുത്തരം തിരഞ്ഞെടുക്കുക

1. A-IV, B-I, C-II, D-III
2. A-I, B-II, C-IV, D-III
3. A-III, B-II, C-IV, D-I
4. A-IV, B-III, C-II, D-I

Options :

485584146873. 1
485584146874. 2

485584146875. 3

485584146876. 4

Question Number : 84 Question Id : 48558436719 Question Type : MCQ Option Shuffling : No Is Question Mandatory : No Calculator : None Response Time : N.A Think Time : N.A Minimum Instruction Time : 0

Correct Marks : 5 Wrong Marks : 1

Question Key Details :

Key	Value
Comprehension	MCQ

यादी I व यादी II जुळवा.

यादी I		यादी II	
A.	माउंट एटना	I.	टॉझानिया
B.	किलीमांजारो	II.	इकॅडोर
C.	कोटोपाक्सी	III.	कॅलिफॉर्निया (यू. एस)
D.	माउंट शास्त	IV.	सिसिली, इटली

खाली दिलेल्या पर्यायातून योग्य उत्तराची निवड करा.

1. A-IV, B-I, C-II, D-III

2. A-I, B-II, C-IV, D-III

3. A-III, B-II, C-IV, D-I

4. A-IV, B-III, C-II, D-I

Options :

485584146873. 1

485584146874. 2

485584146875. 3

485584146876. 4

Question Number : 84 Question Id : 48558436719 Question Type : MCQ Option Shuffling : No Is Question Mandatory : No Calculator : None Response Time : N.A Think Time : N.A Minimum Instruction Time : 0

Correct Marks : 5 Wrong Marks : 1

Question Key Details :

Key	Value
Comprehension	MCQ

ਠਾਲਿਕਾ I ਖਵਿੱਠ ਠਾਲਿਕਾ II ਕੂ ਪੀਕਾਰੂ

ਠਾਲਿਕਾ I		ਠਾਲਿਕਾ II	
A.	ਪਾਉਂਟ ਏਟਨਾ (Mt. etna)	I.	ਤਾਜ਼ਾਨੀਆ (Tanzania)
B.	ਕਿਲੀਮਾਂਜਾਰੋ (Kilimanjaro)	II.	ਐਕੁਏਡੋਰ (Equador)
C.	ਕੋਟੋਪਾਕਸੀ (Cotopaxi)	III.	ਕਾਲਿਫੋਰਨੀਆ (California, USA)
D.	ਪਾਉਂਟ ਸ਼ਾਸਟਾ (Mt. Shasta)	IV.	ਸਿਸਿਲੀ (Sisily, Italy)

ਨਿੱਘੁ ਵਿਕਲਗ ਕੂਠਿਕਾਰੂ ਖਠਿਕ ਭਰਰਰੀ ਚਿੱਕਰ ਕਰਰੂ:

1. A-IV, B-I, C-II, D-III
2. A-I, B-II, C-IV, D-III
3. A-III, B-II, C-IV, D-I
4. A-IV, B-III, C-II, D-I

Options :

485584146873. 1
485584146874. 2
485584146875. 3
485584146876. 4

Question Number : 84 Question Id : 48558436719 Question Type : MCQ Option Shuffling : No Is Question Mandatory : No Calculator : None Response Time : N.A Think Time : N.A Minimum Instruction Time : 0

Correct Marks : 5 Wrong Marks : 1

Question Key Details :

Key	Value
Comprehension	MCQ

ਸੂਚੀ I ਦਾ ਸੂਚੀ II ਨਾਲ ਮਿਲਾਣ ਕਰੋ:

ਸੂਚੀ I		ਸੂਚੀ II	
ਵਿਸ਼ਵ ਵਿਚਲੇ ਜਵਾਲਾਮੁਖੀ		ਸਥਾਨ	
A.	ਮਾਉਂਟ ਏਟਨਾ	I.	ਤਨਜ਼ਾਨੀਆ
B.	ਕਿਲੀਮਾਂਜਾਰੋ	II.	ਇਕੁਏਡੋਰ
C.	ਕੋਟੋਪਾਕਸੀ	III.	ਕੈਲੀਫੋਰਨੀਆ
D.	ਮਾਉਂਟ ਸ਼ਾਸਟਾ	IV.	ਸਿਸਿਲੀ, ਇਟਲੀ

ਹੇਠਾਂ ਦਿੱਤੇ ਵਿਕਲਪਾਂ ਵਿੱਚੋਂ ਸਹੀ ਉੱਤਰ ਚੁਣੋ:

1. A-IV, B-I, C-II, D-III
2. A-I, B-II, C-IV, D-III
3. A-III, B-II, C-IV, D-I
4. A-IV, B-III, C-II, D-I

Options :

485584146873. 1
485584146874. 2
485584146875. 3
485584146876. 4

Question Number : 84 Question Id : 48558436719 Question Type : MCQ Option Shuffling : No Is Question Mandatory : No Calculator : None Response Time : N.A Think Time : N.A Minimum Instruction Time : 0

Correct Marks : 5 Wrong Marks : 1

Question Key Details :

Key	Value
Comprehension	MCQ

பட்டியல் I ஐ பட்டியல் II உடன் பொருத்துக

பட்டியல் I		பட்டியல் II	
A.	எட்னா மலைச்சிகரம்	I.	தான்சானியா
B.	கிளிமாஞ்சாரோ	II.	ஈக்வேடார்
C.	கோடோபாக்சி	III.	கலிஃபோர்னியா (அமெரிக்கா)
D.	சாஸ்தா மலைச்சிகரம்	IV.	சிசிலி, இத்தாலி

கீழே தரப்பட்டுள்ள வாய்ப்புகளில் இருந்து சரியான விடையைத் தேர்ந்தெடுக்கவும்:

1. A-IV, B-I, C-II, D-III
2. A-I, B-II, C-IV, D-III
3. A-III, B-II, C-IV, D-I
4. A-IV, B-III, C-II, D-I

Options :

485584146873. 1
485584146874. 2
485584146875. 3
485584146876. 4

Question Number : 84 Question Id : 48558436719 Question Type : MCQ Option Shuffling : No Is Question Mandatory : No Calculator : None Response Time : N.A Think Time : N.A Minimum Instruction Time : 0

Correct Marks : 5 Wrong Marks : 1

Question Key Details :

Key	Value
Comprehension	MCQ

జతపరచండి :

ప్రపంచం యొక్క ప్రధాన అగ్నిపర్వతాలు

జాబితా I		జాబితా II	
A.	Mt. ఇట్నా	I.	తంజానియా
B.	కీలీమంజారో	II.	ఈక్వడర్
C.	కోల్పాక్షి	III.	కాలిఫోర్నియా(యు.ఎస్)
D.	Mt. శఫ్టా	IV.	సిసిలి, ఇటలీ

సరైన సమాధానం ఎన్నుకోండి

1. A-IV, B-I, C-II, D-III
2. A-I, B-II, C-IV, D-III
3. A-III, B-II, C-IV, D-I
4. A-IV, B-III, C-II, D-I

Options :

485584146873. 1
485584146874. 2
485584146875. 3
485584146876. 4

Question Number : 84 Question Id : 48558436719 Question Type : MCQ Option Shuffling : No Is Question Mandatory : No Calculator : None Response Time : N.A Think Time : N.A Minimum Instruction Time : 0

Correct Marks : 5 Wrong Marks : 1

Question Key Details :

Key	Value
Comprehension	MCQ

فہرست II	فہرست I
I. نئزانیہ	A. ایٹنا پہاڑی
II. ایکواٹور	B. کلی منجاریو
III. کیلی فورنیا	C. کوٹو بیکیسی
IV. سمٹلی اٹلی	D. ساسنہ پہاڑی

صحیح جواب چنیں :

1. A-IV, B-I, C-II, D-III

2. A-I, B-II, C-IV, D-III

3. A-III, B-II, C-IV, D-I

4. A-IV, B-III, C-II, D-I

Options :

485584146873. 1

485584146874. 2

485584146875. 3

485584146876. 4

Question Number : 85 Question Id : 48558436720 Question Type : MCQ Option Shuffling : No Is Question Mandatory : No Calculator : None Response Time : N.A Think Time : N.A Minimum Instruction Time : 0

Correct Marks : 5 Wrong Marks : 1

Question Key Details :

Key	Value
Comprehension	MCQ

A Finance Bill is a 'Money Bill' as defined in Article 110 of the Constitution. It can be tabled at :

1. Only in the Lok Sabha

2. Only in the Rajya Sabha

3. Any house of Lok Sabha or Rajya Sabha

4. Can be directly pass by cabinet

Options :

485584146877. 1

485584146878. 2

485584146879. 3

485584146880. 4

Question Number : 85 Question Id : 48558436720 Question Type : MCQ Option Shuffling : No Is Question Mandatory : No Calculator : None Response Time : N.A Think Time : N.A Minimum Instruction Time : 0

Correct Marks : 5 Wrong Marks : 1

Question Key Details :

Key	Value
Comprehension	MCQ

संविधान की धारा 110 के अनुसार वित्त बिल एक 'धन का बिल' होता है, इसे _____ चर्चाओं के लिए रखा जा सकता है:

1. केवल लोकसभा में
2. केवल राज्यसभा में
3. लोक सभा या राज्य सभा के किसी भी सदन में
4. इसे मंत्रिमंडल द्वारा सीधे पारित किया जा सकता है

Options :

485584146877. 1

485584146878. 2

485584146879. 3

485584146880. 4

Question Number : 85 Question Id : 48558436720 Question Type : MCQ Option Shuffling : No Is Question Mandatory : No Calculator : None Response Time : N.A Think Time : N.A Minimum Instruction Time : 0

Correct Marks : 5 Wrong Marks : 1

Question Key Details :

Key	Value
Comprehension	MCQ

সংবিধানৰ 110নং অনুচ্ছেদ মতে এখন বিত্তীয় বিলক "মুদ্রা বিল" বুলি সংজ্ঞাবদ্ধ কৰা হৈছে।

ইয়াক উত্থাপন কৰিব পৰা যায়:

1. অকল লোকসভাত
2. অকল ৰাজ্যসভাত
3. ৰাজ্যসভা বা লোকসভাৰ যিকোনো সদনতে
4. পোনে পোনে কেবিনেটত গৃহীত হয়

Options :

485584146877. 1

485584146878. 2

485584146879. 3

485584146880. 4

Question Number : 85 Question Id : 48558436720 Question Type : MCQ Option Shuffling : No Is Question Mandatory : No Calculator : None Response Time : N.A Think Time : N.A Minimum Instruction Time : 0

Correct Marks : 5 Wrong Marks : 1

Question Key Details :

Key	Value
Comprehension	MCQ

সংবিধানের 110 অনুচ্ছেদ অনুযায়ী একটি অর্থ বিল বা ফাইন্যান্স বিল হচ্ছে 'Money Bill'ও। এটি পেশ করা হয়ঃ

1. শুধুমাত্র লোকসভায়
2. শুধুমাত্র রাজ্যসভায়
3. লোকসভা অথবা রাজ্যসভা যেকোন জায়গায়
4. সরসরি ক্যাবিনেটে

Options :

485584146877. 1
485584146878. 2
485584146879. 3
485584146880. 4

Question Number : 85 Question Id : 48558436720 Question Type : MCQ Option Shuffling : No Is Question Mandatory : No Calculator : None Response Time : N.A Think Time : N.A Minimum Instruction Time : 0

Correct Marks : 5 Wrong Marks : 1

Question Key Details :

Key	Value
Comprehension	MCQ

ভারতনাং অঁধারতানা অনুচ্ছেদ - 110 মাং ঙাঠনান্স বিল নে মনী বিল তরীকে ব্যাখ্যায়িত করেব ঙে. তেনে ক্যাং রঞ্জু করবামাং আবে ঙে ?

1. ঙকত বীক সভামাং
2. ঙকত রাজ্য সভামাং
3. রাজ্য সভা অথবা বীক সভা কীঠ পড়া গৃহমাং
4. কেবীনেট দ্বারা পরব্যারু

Options :

485584146877. 1
485584146878. 2
485584146879. 3
485584146880. 4

Question Number : 85 Question Id : 48558436720 Question Type : MCQ Option Shuffling : No Is Question Mandatory : No Calculator : None Response Time : N.A Think Time : N.A Minimum Instruction Time : 0

Correct Marks : 5 Wrong Marks : 1

Question Key Details :

Key	Value
Comprehension	MCQ

ಒಂದು ಹಣಕಾಸು ಮಸೂದೆಯು ಒಂದು 'ಹಣದ ಮಸೂದೆ' ಎಂದು ಸಂವಿಧಾನದ ವಿಧಿ 110ರಲ್ಲಿ ವ್ಯಾಖ್ಯಾನಿಸಲಾಗಿದೆ. ಇದನ್ನು ಮಂಡಿಸುವುದು:

1. ಲೋಕಸಭೆಯಲ್ಲಿ ಮಾತ್ರ
2. ರಾಜ್ಯಸಭೆಯಲ್ಲಿ ಮಾತ್ರ
3. ಲೋಕಸಭೆ ಅಥವಾ ರಾಜ್ಯಸಭೆ ಯಾವುದರಲ್ಲಿಯಾದರೂ
4. ಸಂಪುಟದಿಂದ ನೇರವಾಗಿ ಅನುಮೋದಿಸಬಹುದು

Options :

485584146877. 1
485584146878. 2
485584146879. 3
485584146880. 4

Question Number : 85 Question Id : 48558436720 Question Type : MCQ Option Shuffling : No Is Question Mandatory : No Calculator : None Response Time : N.A Think Time : N.A Minimum Instruction Time : 0

Correct Marks : 5 Wrong Marks : 1

Question Key Details :

Key	Value
Comprehension	MCQ

ಔರಂಗ್‌ಜೇಬನು, ಆಠರಿತ್ತಿಕ್ಕಿ 110 (ಪ್ರಕಾರಂ ಓರು ಧನಕಾರ್ಯ ಣಿಲಿ 'ಮಣಿ ಣಿಲಿ' ಆಠ. ಇತ್ ಆವತರಿಪ್ಪಿಕ್ಕಾವುಣ್ಣು ಅಠಿಲಿ?

1. ಲೋಕ ಸಠಿಯಿಲಿ ಮಾತ್ರಂ
2. ರಾಜ್ಯ ಸಠಿಯಿಲಿ ಮಾತ್ರಂ
3. ಲೋಕಸಠಿಯಿಲಿ ರಾಜ್ಯಸಠಿಯಿಲಿ
4. ಕ್ಯಾಢಿಢಿಗ್ಗೆ ಢೇರಿತ್ ಪಾಢ್ಢಾಕಾಂ

Options :

485584146877. 1
485584146878. 2
485584146879. 3
485584146880. 4

Question Number : 85 Question Id : 48558436720 Question Type : MCQ Option Shuffling : No Is Question Mandatory : No Calculator : None Response Time : N.A Think Time : N.A Minimum Instruction Time : 0

Correct Marks : 5 Wrong Marks : 1

Question Key Details :

Key	Value
-----	-------

संविधानातील आर्टिकल 110 वित्त विधेयक हे वित्त मसुदा म्हणून उल्लेखित आहे. जे कोणत्या पटलावर मांडले जाते?

1. केवळ लोकसभेत
2. केवळ राज्यसभेत
3. लोकसभा किंवा राज्यसभेच्या कोणत्याही गृहामध्ये
4. मंत्रीमंडळाकडून त्वरीत मान्य केले जाते

Options :

485584146877. 1
485584146878. 2
485584146879. 3
485584146880. 4

Question Number : 85 Question Id : 48558436720 Question Type : MCQ Option Shuffling : No Is Question Mandatory : No Calculator : None Response Time : N.A Think Time : N.A Minimum Instruction Time : 0

Correct Marks : 5 Wrong Marks : 1

Question Key Details :

Key	Value
Comprehension	MCQ

ଭାରତୀୟ ସମ୍ବିଧାନ ର ସୂଚୀ ସଂଖ୍ୟା 110 ରେ ଗୋଟିଏ ବିଭିନ୍ନ ବିଲ୍ () ଗୋଟିଏ ମୁଦ୍ରା ବିଲ୍ () ଭାବରେ ବ୍ୟାଖ୍ୟା କରାଯାଇଛି । ଏହା କେଉଁ ସଦନ ପକ୍ଷରେ ପସ୍ତୁତ କରାଯାଇ ପାରିବ ?

1. କେବଳ ଲୋକ ସଭାରେ
2. କେବଳ ରାଜ୍ୟ ସଭାରେ
3. ଲୋକ ସଭା କିମ୍ବା ରାଜ୍ୟ ସଭାର ଯେକୌଣସି ଗୃହରେ
4. କ୍ୟାବିନେଟ୍ ଦ୍ୱାରା ସିଧାସଳଖ ପାରିତ କରାଯାଇପାରିବ

Options :

485584146877. 1
485584146878. 2
485584146879. 3
485584146880. 4

Question Number : 85 Question Id : 48558436720 Question Type : MCQ Option Shuffling : No Is Question Mandatory : No Calculator : None Response Time : N.A Think Time : N.A Minimum Instruction Time : 0

Correct Marks : 5 Wrong Marks : 1

Question Key Details :

Key	Value
Comprehension	MCQ

ਇੱਕ ਵਿੱਤ ਬਿੱਲ ਇੱਕ " ਪੈਸਾ ਬਿੱਲ " ਹੁੰਦਾ ਹੈ ਜਿਵੇਂ ਕਿ ਸੰਵਿਧਾਨ ਦੀ ਧਾਰਾ 110 ਵਿੱਚ ਪ੍ਰਤੀਭਾਸ਼ਿਤ ਕੀਤਾ ਗਿਆ ਹੈ। ਉਹ ਪੇਸ਼ ਕੀਤਾ ਜਾ ਸਕਦਾ ਹੈ?

1. ਸਿਰਫ਼ ਲੋਕ ਸਭਾ ਵਿੱਚ।
2. ਸਿਰਫ਼ ਰਾਜ ਸਭਾ ਵਿੱਚ।
3. ਲੋਕ ਸਭਾ ਤੇ ਰਾਜ ਸਭਾ ਦਾ ਕੋਈ ਵੀ ਭਵਨ।
4. ਸਿੱਧਾ ਕੈਬਿਨੇਟ ਦੁਆਰਾ ਪਾਸ ਕੀਤਾ ਜਾ ਸਕਦਾ ਹੈ।

Options :

485584146877. 1
485584146878. 2
485584146879. 3
485584146880. 4

Question Number : 85 Question Id : 48558436720 Question Type : MCQ Option Shuffling : No Is Question Mandatory : No Calculator : None Response Time : N.A Think Time : N.A Minimum Instruction Time : 0

Correct Marks : 5 Wrong Marks : 1

Question Key Details :

Key	Value
Comprehension	MCQ

ਅਰਥਿਕ ਲਾਭਮੱਧ ਸ਼੍ਰੇਣੀ ਵਿੱਚ 110 ਏਨਪਤੁ ਓਨੁ ਨੀਤਿ ਮਸ਼ੋਥਾ ਅਥਾਵਤੁ 'ਪਣ ਮਸ਼ੋਥਾ' ਏਨ ਵਰੇਯਠੁਕਕਪਠੁਕਿਠੁ. ਇਤੁ ਏਵਵਾਠੁ ਨੀਠੇਵੇਠੁਠੁਪਠੁ :

1. ਮਕਕਏਵਯਿਲ ਮਠੁਠੁ
2. ਮਾਨੀਲਠੁਕਏਵਯਿਲ ਮਠੁਠੁ
3. ਮਕਕਏਵ ਅਲਲਤੁ ਮਾਨੀਲਠੁਕਏਵ ਆਕਿਯ ਏਠੇਠੁਠੁ ਓਨੁਠੀਲ
4. ਕੇਪੀਨਠੁ/ਅਮੇਸ਼ਚਰਵੇਯਾਲ ਨੇਰਠਿਯਾਕ ਇਠੁਠੁਠੁਪਠੁ

Options :

485584146877. 1
485584146878. 2
485584146879. 3
485584146880. 4

Question Number : 85 Question Id : 48558436720 Question Type : MCQ Option Shuffling : No Is Question Mandatory : No Calculator : None Response Time : N.A Think Time : N.A Minimum Instruction Time : 0

Correct Marks : 5 Wrong Marks : 1

Question Key Details :

Key	Value
Comprehension	MCQ

ఆర్థిక బిల్లు అనేది రాజ్యాంగం లోని ఆర్టికల్ 110 లో నిర్వహించబడిన 'ద్రవ్యబిల్లు'. ఎక్కడ సమర్పించబడుతుంది:

1. లోకసభలో మాత్రమే
2. రాజ్యసభలో మాత్రమే
3. లోకసభ లేదా రాజ్యసభ
4. నేరుగా క్యాబినెట్ ఆమోదించవచ్చు

Options :

485584146877. 1
485584146878. 2
485584146879. 3
485584146880. 4

Question Number : 85 Question Id : 48558436720 Question Type : MCQ Option Shuffling : No Is Question Mandatory : No Calculator : None Response Time : N.A Think Time : N.A Minimum Instruction Time : 0

Correct Marks : 5 Wrong Marks : 1

Question Key Details :

Key	Value
Comprehension	MCQ

ایک 'Finance Bill' اصل میں 'Money Bill' ہوتا ہے جیسے کہ آئین کے آرٹیکل 110 میں بیان کیا گیا ہے۔ اسکو کہاں پیش کیا جا سکتا ہے؟

1. صرف لوک سبھا میں
2. صرف راجیہ سبھا میں
3. لوک سبھا یا راجیہ سبھا میں سے کوئی بھی
4. کابینہ سیدھا پاس کر سکتی ہے

Options :

485584146877. 1
485584146878. 2
485584146879. 3
485584146880. 4

Question Number : 86 Question Id : 48558436721 Question Type : MCQ Option Shuffling : No Is Question Mandatory : No Calculator : None Response Time : N.A Think Time : N.A Minimum Instruction Time : 0

Correct Marks : 5 Wrong Marks : 1

Question Key Details :

Key	Value
Comprehension	MCQ

Delhi is the Union Territory that sends its representative in Rajya Sabha. Which is the other Union Territory that sends a member representative to Rajya Sabha?

1. Dadra and Nagar Haveli
2. Daman and Diu
3. Puducherry
4. Chandigarh

Options :

485584146881. 1
485584146882. 2
485584146883. 3
485584146884. 4

Question Number : 86 Question Id : 48558436721 Question Type : MCQ Option Shuffling : No Is Question Mandatory : No Calculator : None Response Time : N.A Think Time : N.A Minimum Instruction Time : 0

Correct Marks : 5 Wrong Marks : 1

Question Key Details :

Key	Value
Comprehension	MCQ

दिल्ली एक केन्द्र शासित प्रदेश है जो राज्य सभा में अपना प्रतिनिधित्व भेजता है। दूसरा केन्द्रशासित प्रदेश कौन सा है जो राज्य सभा में अपना एक प्रतिनिधित्व सदस्य भेजता है:

1. दादरा तथा नगर हवेली
2. दमन तथा द्यू
3. पुडुचेरी
4. चंडीगढ़

Options :

485584146881. 1
485584146882. 2
485584146883. 3
485584146884. 4

Question Number : 86 Question Id : 48558436721 Question Type : MCQ Option Shuffling : No Is Question Mandatory : No Calculator : None Response Time : N.A Think Time : N.A Minimum Instruction Time : 0

Correct Marks : 5 Wrong Marks : 1

Question Key Details :

Key	Value
Comprehension	MCQ

दिल्ली এখন केन्द्रीय शासित अঞ্চल यिसे निजब प्रतिनिधि राज्य सभाले पठियाय। राज्यसभाले निजब प्रतिनिधि पठोरा आनखन केन्द्रीय शासित अঞ্চल हैछे?

1. दादरा आरु नगर हारेली
2. डमन आरु डिउ
3. पुदुचेरी
4. चण्डीगड़

Options :

485584146881. 1
485584146882. 2
485584146883. 3
485584146884. 4

Question Number : 86 Question Id : 48558436721 Question Type : MCQ Option Shuffling : No Is Question Mandatory : No Calculator : None Response Time : N.A Think Time : N.A Minimum Instruction Time : 0

Correct Marks : 5 Wrong Marks : 1

Question Key Details :

Key	Value
Comprehension	MCQ

केन्द्रीयशासित राज्य हिसेबे राज्यसभाय दिल्लीर प्रतिनिधि आछे। अन्य कोन केन्द्रीयशासित राज्य राज्यसभाय प्रतिनिधि पाठोते पारे?

1. दादरा एवं नागर हाभेलि
2. दमन एवं दिउ
3. पदुचेरि
4. चण्डीगड़

Options :

485584146881. 1
485584146882. 2
485584146883. 3
485584146884. 4

Question Number : 86 Question Id : 48558436721 Question Type : MCQ Option Shuffling : No Is Question Mandatory : No Calculator : None Response Time : N.A Think Time : N.A Minimum Instruction Time : 0

Correct Marks : 5 Wrong Marks : 1

Question Key Details :

Key	Value
Comprehension	MCQ

દિલ્હીએ કેન્દ્રશાસિત પ્રદેશ છે જે રાજ્યસભામાં તેનું પ્રતિનિધિત્વ મોકલે છે. બીજો કયો કેન્દ્રશાસિત પ્રદેશ છે જે રાજ્ય સભામાં પ્રતિનિધિને મોકલે છે ?

1. દાદરા અને નગર હવેલી
2. દમણ અને દીયુ
3. પુદુચેરી
4. ચંડીગઢ

Options :

485584146881. 1
485584146882. 2
485584146883. 3
485584146884. 4

Question Number : 86 Question Id : 48558436721 Question Type : MCQ Option Shuffling : No Is Question Mandatory : No Calculator : None Response Time : N.A Think Time : N.A Minimum Instruction Time : 0

Correct Marks : 5 Wrong Marks : 1

Question Key Details :

Key	Value
Comprehension	MCQ

દેહલિયુ ક્ષેત્રોડલિત પ્રદેશવોગિદુ, અદુ તેનુ પ્રતિનિધિત્વવનુ રોજ્યસભેકે કલુહિસુત્તદે. ઇન્યોવ ક્ષેત્રોડલિત પ્રદેશલુ ઁબુ પ્રતિનિધિ સદસ્યરનુ રોજ્યસભેકે કલુહિસુત્તદે?

1. દોદરો મતુ નગર હવેલી
2. દોમણ મતુ દીયુ
3. પ્રુદુચેરી
4. ચંડીગઢ

Options :

485584146881. 1
485584146882. 2
485584146883. 3
485584146884. 4

Question Number : 86 Question Id : 48558436721 Question Type : MCQ Option Shuffling : No Is Question Mandatory : No Calculator : None Response Time : N.A Think Time : N.A Minimum Instruction Time : 0

Correct Marks : 5 Wrong Marks : 1

Question Key Details :

Key	Value
Comprehension	MCQ

തങ്ങളുടെ പ്രതിനിധിയെ രാജ്യസഭയിലേക്ക് അയക്കുന്ന കേന്ദ്ര ഭരണ പ്രദേശം ആണ് ഡൽഹി. ഇത് പോലെ, തങ്ങളുടെ പ്രതിനിധിയെ രാജ്യസഭയിലേക്ക് അയക്കുന്ന മറ്റൊരു കേന്ദ്ര ഭരണ പ്രദേശം ഏത് ?

1. ദാദർ & നാഗർ ഹവേലി
2. ദാമൻ & ദിയു
3. പുതുച്ചേരി
4. ചണ്ഡീഗർ

Options :

485584146881. 1
485584146882. 2
485584146883. 3
485584146884. 4

Question Number : 86 Question Id : 48558436721 Question Type : MCQ Option Shuffling : No Is Question Mandatory : No Calculator : None Response Time : N.A Think Time : N.A Minimum Instruction Time : 0

Correct Marks : 5 Wrong Marks : 1

Question Key Details :

Key	Value
Comprehension	MCQ

राज्यसभेत आपले प्रतिनिधी पाठवणारा दिल्ली हा केंद्रशासित प्रदेश आहे. त्याप्रमाणे इतर कोणता केंद्रशासित प्रदेश हा आपले प्रतिनिधी सदस्य राज्यसभेवर पाठवतो?

1. दादरा आणि नगर हवेली
2. दमण आणि दिव
3. पुदुच्चेरी
4. चंदिगढ

Options :

485584146881. 1
485584146882. 2
485584146883. 3
485584146884. 4

Question Number : 86 Question Id : 48558436721 Question Type : MCQ Option Shuffling : No Is Question Mandatory : No Calculator : None Response Time : N.A Think Time : N.A Minimum Instruction Time : 0

Correct Marks : 5 Wrong Marks : 1

Question Key Details :

Key	Value
Comprehension	MCQ

କେନ୍ଦ୍ର ଶାସିତ ଅଞ୍ଚଳ, ଦିଲ୍ଲୀ, ତାର ପ୍ରତିନିଧିତ୍ୱକୁ ରାଜ୍ୟ ସଭା କୁ ପଠାଏ। ଏହା ବ୍ୟତୀତ ଆଉ କେଉଁ କେନ୍ଦ୍ର ଶାସିତ ଅଞ୍ଚଳର ପ୍ରତିନିଧି ଗୋଟିଏ ସଦସ୍ୟକୁ ରାଜ୍ୟସଭାରେ ପ୍ରତିନିଧିତ୍ୱ କରିବା ପାଇଁ ପଠାଏ?

1. ଦାଦ୍ରା ଏବଂ ନଗର ହବେଲି
2. ଦାମନ ଏବଂ ଦିଝୁ
3. ପୁଦୁଚେରୀ
4. ଚଣ୍ଡିଗଡ଼

Options :

485584146881. 1
485584146882. 2
485584146883. 3
485584146884. 4

Question Number : 86 Question Id : 48558436721 Question Type : MCQ Option Shuffling : No Is Question Mandatory : No Calculator : None Response Time : N.A Think Time : N.A Minimum Instruction Time : 0

Correct Marks : 5 Wrong Marks : 1

Question Key Details :

Key	Value
Comprehension	MCQ

ਦਿੱਲੀ ਇੱਕ ਕੇਂਦਰ ਸ਼ਾਸିତ ਪ੍ਰਦੇਸ਼ ਹੈ ਜੋ ਰਾਜ ਸଭା ਵਿੱਚ ਆਪਣੀ ਪ੍ਰਤੀਨਿਧਤਾ ਭੇਜਦਾ ਹੈ। ਕਿਹੜਾ ਹੋਰ ਕੇਂਦਰ ਸ਼ਾਸਿਤ ਪ੍ਰਦੇਸ਼ ਹੈ ਜੋ ਰਾਜ ਸଭਾ ਵਿੱਚ ਇੱਕ ਮੈਂਬਰ ਪ੍ਰਤੀਨਿਧੀ ਭੇਜਦਾ ਹੈ?

1. ਦਾਦਰ ਅਤੇ ਨਗਰ ਹਵੇਲੀ
2. ਦਮਨ ਅਤੇ ਦਿਊ
3. ਪੁਡੁਚੇਰੀ
4. ਚੰਡੀਗੜ੍ਹ

Options :

485584146881. 1
485584146882. 2
485584146883. 3
485584146884. 4

Question Number : 86 Question Id : 48558436721 Question Type : MCQ Option Shuffling : No Is Question Mandatory : No Calculator : None Response Time : N.A Think Time : N.A Minimum Instruction Time : 0

Correct Marks : 5 Wrong Marks : 1

Question Key Details :

Key	Value
Comprehension	MCQ

డెల్లీ ఒక యూనియన్ పిరతేసమ్ ఆకమ్, ఇతు తనతు పిరతినితియె మానిలంగలవై (రాజ్య సపా) ఁదుప్పినిరక అనుప్పకఱుతు. ఇతేపొల్ తనతు పిరతినితియె మానిలంగలవైకు ఁదుప్పినిరక అనుప్పమ్ మఱురొఱు యూనియన్ పిరతేసమ్ ఁతు?

1. తత్రా మఱుఱుమ్ నాకఱు ఱువైలి
2. డామన్ మఱుఱుమ్ డెయ్య
3. పుతుశ్శేరి
4. శణ్డికఱు

Options :

485584146881. 1
485584146882. 2
485584146883. 3
485584146884. 4

Question Number : 86 Question Id : 48558436721 Question Type : MCQ Option Shuffling : No Is Question Mandatory : No Calculator : None Response Time : N.A Think Time : N.A Minimum Instruction Time : 0

Correct Marks : 5 Wrong Marks : 1

Question Key Details :

Key	Value
Comprehension	MCQ

డిల్లీ అనేది రాజ్యసభలో తన ప్రాతినిధ్యాన్ని పంపే కేంద్రపాలిత ప్రాంతం. సభ్యునిగా ప్రతినిధిని రాజ్యసభకు పంపే ఇతర కేంద్రపాలిత ప్రాంతం ఏది:

1. డాడ్రా నగర్ హవేలీ
2. డామన్ డియ్య
3. పుదుచ్చేరి
4. చండీఘడ్

Options :

485584146881. 1
485584146882. 2
485584146883. 3
485584146884. 4

Question Number : 86 Question Id : 48558436721 Question Type : MCQ Option Shuffling : No Is Question Mandatory : No Calculator : None Response Time : N.A Think Time : N.A Minimum Instruction Time : 0

Correct Marks : 5 Wrong Marks : 1

Question Key Details :

Key	Value
Comprehension	MCQ

دلی ایک یونین ٹریڈری ہے جو راجیہ سبھا میں اپنی نمائندگی بھیجتی ہے۔ ایسی اور کن سی یونین ٹریڈری ہے جو راجیہ سبھا میں اپنا نمائندہ بھیجتی ہے؟

1. دائرا اور نگر حویلی
2. دمن اور دیو
3. پدو چیری
4. جندی گڑھ

Options :

485584146881. 1
485584146882. 2
485584146883. 3
485584146884. 4

Question Number : 87 Question Id : 48558436722 Question Type : MCQ Option Shuffling : No Is Question Mandatory : No Calculator : None Response Time : N.A Think Time : N.A Minimum Instruction Time : 0

Correct Marks : 5 Wrong Marks : 1

Question Key Details :

Key	Value
Comprehension	MCQ

The Constitution of India gives 6 fundamental rights to its citizen. It does not include :

1. Right to freedom of Speech & Expression
2. Right against Exploitation
3. Right to Equality
4. Right to Property

Options :

485584146885. 1
485584146886. 2
485584146887. 3
485584146888. 4

Question Number : 87 Question Id : 48558436722 Question Type : MCQ Option Shuffling : No Is Question Mandatory : No Calculator : None Response Time : N.A Think Time : N.A Minimum Instruction Time : 0

Correct Marks : 5 Wrong Marks : 1

Question Key Details :

Key	Value
Comprehension	MCQ

भारत का संविधान यहाँ के नागरिकों को 6 मूल अधिकार प्रदान करता है। इसमें शामिल नहीं है:

1. बोलने तथा अभिव्यक्ति की स्वतंत्रता का अधिकार
2. शोषण के विरुद्ध अधिकार
3. समानता का अधिकार
4. संपत्ति का अधिकार

Options :

485584146885. 1
485584146886. 2
485584146887. 3
485584146888. 4

Question Number : 87 Question Id : 48558436722 Question Type : MCQ Option Shuffling : No Is Question Mandatory : No Calculator : None Response Time : N.A Think Time : N.A Minimum Instruction Time : 0

Correct Marks : 5 Wrong Marks : 1

Question Key Details :

Key	Value
Comprehension	MCQ

ভাৰতীয় সংবিধানে দেশৰ নাগৰিকক 6 টা মৌলিক অধিকাৰ প্ৰদান কৰিছে। তলৰ কোনটো তাৰ অন্তৰ্ভুক্ত নহয়?

1. বাক স্বাধীনতা আৰু মত প্ৰকাশৰ স্বাধীনতা
2. শোষণৰ বিৰুদ্ধে অধিকাৰ
3. সমতাৰ অধিকাৰ
4. সম্পত্তিৰ অধিকাৰ

Options :

485584146885. 1
485584146886. 2
485584146887. 3
485584146888. 4

Question Number : 87 Question Id : 48558436722 Question Type : MCQ Option Shuffling : No Is Question Mandatory : No Calculator : None Response Time : N.A Think Time : N.A Minimum Instruction Time : 0

Correct Marks : 5 Wrong Marks : 1

Question Key Details :

Key	Value
Comprehension	MCQ

ভারতের সংবিধানে নাগরিকদের 6 টি মৌলিক অধিকার দেওয়া হয়েছে। যার মধ্যে নেইঃ

1. বাক স্বাধীনতা এবং অভিব্যক্তির অধিকার
2. শোষণের বিরুদ্ধে অধিকার
3. সমতার অধিকার
4. সম্পত্তির অধিকার

Options :

485584146885. 1
485584146886. 2
485584146887. 3
485584146888. 4

Question Number : 87 Question Id : 48558436722 Question Type : MCQ Option Shuffling : No Is Question Mandatory : No Calculator : None Response Time : N.A Think Time : N.A Minimum Instruction Time : 0

Correct Marks : 5 Wrong Marks : 1

Question Key Details :

Key	Value
Comprehension	MCQ

ભારતનું બંધારણ ભારતના નાગરીકોને 6 મૂળભૂત અધિકારો આપે છે. પણ તેમાં કયાં અધિકારનો સમાવેશ થતો નથી ?

1. વાણી અને અભિવ્યક્તિના સ્વતંત્રતાનો અધિકાર
2. શોષણ સામે નો અધિકાર
3. સમાનતાનો અધિકાર
4. મિલકતનો અધિકાર

Options :

485584146885. 1
485584146886. 2
485584146887. 3
485584146888. 4

Question Number : 87 Question Id : 48558436722 Question Type : MCQ Option Shuffling : No Is Question Mandatory : No Calculator : None Response Time : N.A Think Time : N.A Minimum Instruction Time : 0

Correct Marks : 5 Wrong Marks : 1

Question Key Details :

Key	Value
Comprehension	MCQ

ಭಾರತದ ಸಂವಿಧಾನವು ತನ್ನ ನಾಗರಿಕರಿಗೆ 6 ಮೂಲಭೂತ ಹಕ್ಕುಗಳನ್ನು ನೀಡುತ್ತದೆ. ಇದು ಒಳಗೊಂಡಿಲ್ಲದಿರುವುದು:

1. ವಾಕ್ ಮತ್ತು ಅಭಿವ್ಯಕ್ತಿ ಸ್ವಾತಂತ್ರ್ಯ
2. ಶೋಷಣೆಯ ವಿರುದ್ಧ ಹಕ್ಕು
3. ಸಮಾನತೆಯ ಹಕ್ಕು
4. ಆಸ್ತಿಯನ್ನು ಹೊಂದುವ ಹಕ್ಕು

Options :

- 485584146885. 1
- 485584146886. 2
- 485584146887. 3
- 485584146888. 4

Question Number : 87 Question Id : 48558436722 Question Type : MCQ Option Shuffling : No Is Question Mandatory : No Calculator : None Response Time : N.A Think Time : N.A Minimum Instruction Time : 0

Correct Marks : 5 Wrong Marks : 1

Question Key Details :

Key	Value
Comprehension	MCQ

ಉತ್ಪನ್ನ ಔದ್ಯೋಗದ ಅನುಸೂಚಿಸಿರುವ 6 ಮೂಲಭೂತ ಅರ್ವಕಾಶಗಳಲ್ಲಿ ಉಳಿದಿರುವುದು ಏನು ?

1. ಅಡಿಪಾಯ ಸ್ವಾತಂತ್ರ್ಯ
2. ಚುನಾಯಿತಿಯ ವಿರುದ್ಧ ಅರ್ವಕಾಶ
3. ಸಮಾನತೆಯ ಅರ್ವಕಾಶ
4. ಸ್ವಾತಂತ್ರ್ಯದ ಅರ್ವಕಾಶ

Options :

- 485584146885. 1
- 485584146886. 2
- 485584146887. 3
- 485584146888. 4

Question Number : 87 Question Id : 48558436722 Question Type : MCQ Option Shuffling : No Is Question Mandatory : No Calculator : None Response Time : N.A Think Time : N.A Minimum Instruction Time : 0

Correct Marks : 5 Wrong Marks : 1

Question Key Details :

Key	Value
Comprehension	MCQ

भारतीय संविधानाने नागरिकांना दिलेल्या 6 मूलभूत हक्कात याचा समावेश नाही -

1. भाषण व अभिव्यक्ती स्वातंत्र्य हक्क
2. शोषणाविरुद्धचा हक्क
3. समानतेचा हक्क
4. मालमत्तेचा हक्क

Options :

485584146885. 1
485584146886. 2
485584146887. 3
485584146888. 4

Question Number : 87 Question Id : 48558436722 Question Type : MCQ Option Shuffling : No Is Question Mandatory : No Calculator : None Response Time : N.A Think Time : N.A Minimum Instruction Time : 0

Correct Marks : 5 Wrong Marks : 1

Question Key Details :

Key	Value
Comprehension	MCQ

ଭାରତୀୟ ସମ୍ବିଧାନ ଏହାର ନାଗରିକମାନଙ୍କୁ 6 ଟି ମୌଳିକ ଅଧିକାର ଦେଇଥାଏ। ଏହା ଅନ୍ତର୍ଗତ କଣ ଆସେ ନାହିଁ?

1. ଅଭିବ୍ୟକ୍ତି ଓ ବକ୍ତୃତା ର ସ୍ୱାଧୀନତାର ଅଧିକାର (Right to freedom of Speech & Expression)
2. ଶୋଷଣ ବିରୁଦ୍ଧରେ ଅଧିକାର (Right against Exploitation)
3. ସମାନତାର ଅଧିକାର (Right to Equality)
4. ସମ୍ପତ୍ତିର ଅଧିକାର (Right to Property)

Options :

485584146885. 1
485584146886. 2
485584146887. 3
485584146888. 4

Question Number : 87 Question Id : 48558436722 Question Type : MCQ Option Shuffling : No Is Question Mandatory : No Calculator : None Response Time : N.A Think Time : N.A Minimum Instruction Time : 0

Correct Marks : 5 Wrong Marks : 1

Question Key Details :

Key	Value
Comprehension	MCQ

ਭਾਰਤ ਦਾ ਸੰਵਿਧਾਨ ਆਪਣੇ ਨਾਗਰਿਕਾਂ ਨੂੰ ਛੇ ਮੌਲਿਕ ਅਧਿਕਾਰ ਦਿੰਦਾ ਹੈ। ਇਸ ਵਿੱਚ ਸ਼ਾਮਲ ਨਹੀਂ ਹੈ?

1. ਬੈਲਟ ਤੇ ਪ੍ਰਗਟਾਵੇ ਦੀ ਆਜ਼ਾਦੀ ਦਾ ਅਧਿਕਾਰ
2. ਸ਼ੋਸ਼ਣ ਦੇ ਵਿਰੁੱਧ ਅਧਿਕਾਰ
3. ਸਮਾਨਤਾ ਦਾ ਅਧਿਕਾਰ
4. ਜਾਇਦਾਦ ਦਾ ਅਧਿਕਾਰ

Options :

485584146885. 1
485584146886. 2
485584146887. 3
485584146888. 4

Question Number : 87 Question Id : 48558436722 Question Type : MCQ Option Shuffling : No Is Question Mandatory : No Calculator : None Response Time : N.A Think Time : N.A Minimum Instruction Time : 0

Correct Marks : 5 Wrong Marks : 1

Question Key Details :

Key	Value
Comprehension	MCQ

இந்திய அரசியலமைப்புச் சட்டம் இந்திய குடிமகன்களுக்கு 6 அடிப்படை உரிமைகளை வழங்குகிறது. இதில் அடங்காதது:

1. சுதந்திரமாக பேசவும் வெளிப்படுத்துவதற்குமான உரிமை
2. சுரண்டலுக்கெதிரான உரிமை
3. சமத்துவ உரிமை
4. சொத்து உரிமை

Options :

485584146885. 1
485584146886. 2
485584146887. 3
485584146888. 4

Question Number : 87 Question Id : 48558436722 Question Type : MCQ Option Shuffling : No Is Question Mandatory : No Calculator : None Response Time : N.A Think Time : N.A Minimum Instruction Time : 0

Correct Marks : 5 Wrong Marks : 1

Question Key Details :

Key	Value
Comprehension	MCQ

భారత రాజ్యాంగం పౌరులకు 6 ప్రాథమిక హక్కులను ఇచ్చింది. ఇందులో లేనిది :

1. వాక్ స్వాతంత్ర్యం మరియు భావ వ్యక్తీకరణ హక్కు
2. దోపిడికి వ్యతిరేకంగా హక్కు
3. సమానత్వ హక్కు
4. ఆస్తి హక్కు

Options :

485584146885. 1
485584146886. 2
485584146887. 3
485584146888. 4

Question Number : 87 Question Id : 48558436722 Question Type : MCQ Option Shuffling : No Is Question Mandatory : No Calculator : None Response Time : N.A Think Time : N.A Minimum Instruction Time : 0

Correct Marks : 5 Wrong Marks : 1

Question Key Details :

Key	Value
Comprehension	MCQ

ہندوستان کا آئین شہریوں کو 6 بنیادی حقوق دیتا ہے۔ اس میں کیا شامل نہیں ہے:

1. بولنے اور اظہار رائے کی آزادی کا حق
2. استحصال کے خلاف حق
3. برابری کا حق
4. ملکیت کا حق

Options :

485584146885. 1
485584146886. 2
485584146887. 3
485584146888. 4

Question Number : 88 Question Id : 48558436723 Question Type : MCQ Option Shuffling : No Is Question Mandatory : No Calculator : None Response Time : N.A Think Time : N.A Minimum Instruction Time : 0

Correct Marks : 5 Wrong Marks : 1

Question Key Details :

Key	Value
Comprehension	MCQ

MUDRA Bank has been setup to implemented Pradhan Mantri Mudra Yojana. 'MUDRA' stands for :

1. Micro Units Development Refinance Act
2. Micro Units Development Resource Allocation
3. Medium Unit Development Revenue Allotment
4. Micro Unit Development Refinance Arrangement

Options :

485584146889. 1
485584146890. 2
485584146891. 3
485584146892. 4

Question Number : 88 Question Id : 48558436723 Question Type : MCQ Option Shuffling : No Is Question Mandatory : No Calculator : None Response Time : N.A Think Time : N.A Minimum Instruction Time : 0

Correct Marks : 5 Wrong Marks : 1

Question Key Details :

Key	Value
Comprehension	MCQ

मुद्रा बैंक की स्थापना 'प्रधानमंत्री मुद्रा योजना' के क्रियान्वयन के लिए की गई है। मुद्रा (MUDRA) का तात्पर्य है:

1. माइक्रो यूनिट्स डेवलपमेंट रिफाइनंस एक्ट
2. माइक्रो यूनिट डेवलपमेंट रिसोर्स एलोकेशन
3. मीडियम यूनिट डेवलपमेंट रेवेन्यू अलोटमेंट
4. माइक्रो यूनिट डेवलपमेंट रिफाइनंस अरेंजमेंट

Options :

485584146889. 1
485584146890. 2
485584146891. 3
485584146892. 4

Question Number : 88 Question Id : 48558436723 Question Type : MCQ Option Shuffling : No Is Question Mandatory : No Calculator : None Response Time : N.A Think Time : N.A Minimum Instruction Time : 0

Correct Marks : 5 Wrong Marks : 1

Question Key Details :

Key	Value
Comprehension	MCQ

প্রধানমন্ত্রী মুদ্রা যোজনা বলবৎকৰাৰ বাবে মুদ্রা (MUDRA) বেংক স্থাপন কৰা হৈছে। MUDRA মানে হ'ল:

1. মাইক্ৰ' ইউনিটছ ডেভেলপমেন্ট ৰিফাইনেঞ্চ এক্ট
2. মাইক্ৰ' ইউনিট ডেভেলপমেন্ট ৰিছ'ৰ্ছ এলোকেছন
3. মিডিয়াম ইউনিট ৰেভিনিউ এল'টমেন্ট
4. মাইক্ৰ' ইউনিট ডেভেলপমেন্ট এৰেঞ্জমেন্ট ৰিফাইনেঞ্চ

Options :

485584146889. 1
485584146890. 2
485584146891. 3
485584146892. 4

Question Number : 88 Question Id : 48558436723 Question Type : MCQ Option Shuffling : No Is Question Mandatory : No Calculator : None Response Time : N.A Think Time : N.A Minimum Instruction Time : 0

Correct Marks : 5 Wrong Marks : 1

Question Key Details :

Key	Value
Comprehension	MCQ

MUDRA ব্যাংক প্রধানমন্ত্রী মুদ্রা যোজনা কাৰ্যকৰ কৰতে প্ৰতিষ্ঠা কৰা হৈছিল। 'MUDRA' ৰ পূৰোটা হ'ল:

1. Micro Units Development Refinance Act
2. Micro Units Development Resource Allocation
3. Medium Unit Development Revenue Allotment
4. Micro Unit Development Refinance Arrangement

Options :

485584146889. 1
485584146890. 2
485584146891. 3
485584146892. 4

Question Number : 88 Question Id : 48558436723 Question Type : MCQ Option Shuffling : No Is Question Mandatory : No Calculator : None Response Time : N.A Think Time : N.A Minimum Instruction Time : 0

Correct Marks : 5 Wrong Marks : 1

Question Key Details :

Key	Value
Comprehension	MCQ

પ્રધાન મંત્રી મુદ્રા યોજના ને અમલ કરવા માટે MUDRA બેંક ને બનાવવા માં આવેલ છે. 'MUDRA' નો અર્થ થાય છે:

1. Micro Units Development Refinance Act
2. Micro Units Development Resource Allocation
3. Medium Unit Development Revenue Allotment
4. Micro Unit Development Refinance Arrangement

Options :

485584146889. 1
485584146890. 2
485584146891. 3
485584146892. 4

Question Number : 88 Question Id : 48558436723 Question Type : MCQ Option Shuffling : No Is Question Mandatory : No Calculator : None Response Time : N.A Think Time : N.A Minimum Instruction Time : 0

Correct Marks : 5 Wrong Marks : 1

Question Key Details :

Key	Value
Comprehension	MCQ

પ્રધાન મંત્રી મુદ્રા યોજનાને અમલ કરવા માટે MUDRA બેંકની સ્થાપના કરવામાં આવેલ છે. 'MUDRA' નો અર્થ થાય છે:

1. Micro Units Development Refinance Act
2. Micro Units Development Resource Allocation
3. Medium Unit Development Revenue Allotment
4. Micro Unit Development Refinance Arrangement

Options :

485584146889. 1
485584146890. 2
485584146891. 3
485584146892. 4

Question Number : 88 Question Id : 48558436723 Question Type : MCQ Option Shuffling : No Is Question Mandatory : No Calculator : None Response Time : N.A Think Time : N.A Minimum Instruction Time : 0

Correct Marks : 5 Wrong Marks : 1

Question Key Details :

Key	Value
Comprehension	MCQ

പ്രധാനമന്ത്രി മുദ്ര യോജനയുടെ ഭാഗമായി ആരംഭിച്ച ബാങ്ക് ആണ് MUDRA Bank .
"MUDRA" യുടെ പുരസ്കര രൂപം

1. Micro Units Development Refinance Act
2. Micro Units Development Resource Allocation
3. Medium Unit Development Revenue Allotment
4. Micro Unit Development Refinance Arrangement

Options :

485584146889. 1
485584146890. 2
485584146891. 3
485584146892. 4

Question Number : 88 Question Id : 48558436723 Question Type : MCQ Option Shuffling : No Is Question Mandatory : No Calculator : None Response Time : N.A Think Time : N.A Minimum Instruction Time : 0

Correct Marks : 5 Wrong Marks : 1

Question Key Details :

Key	Value
Comprehension	MCQ

MUDRA बैंकेने प्रधानमंत्री मुद्रायोजना कार्यान्वित केली. यातील 'MUDRA' चे पूर्ण रूप -

1. Micro Units Development Refinance Act
2. Micro Units Development Resource Allocation
3. Medium Unit Development Revenue Allotment
4. Micro Unit Development Refinance Arrangement

Options :

485584146889. 1
485584146890. 2
485584146891. 3
485584146892. 4

Question Number : 88 Question Id : 48558436723 Question Type : MCQ Option Shuffling : No Is Question Mandatory : No Calculator : None Response Time : N.A Think Time : N.A Minimum Instruction Time : 0

Correct Marks : 5 Wrong Marks : 1

Question Key Details :

Key	Value
Comprehension	MCQ

ପ୍ରଧାନମନ୍ତ୍ରୀ Mudra ଯୋଜନାକୁ କାର୍ଯ୍ୟକାରୀ କରିବା ପାଇଁ MUDRA ବ୍ୟାଙ୍କର ଗଠନ କରାଯାଇଛି । 'MUDRA' ର ସଂପ୍ରସାରଣ କଲେ?

1. Micro Units Development Refinance Act
2. Micro Units Development Resource Allocation
3. Medium Unit Development Revenue Allotment
4. Micro Unit Development Refinance Arrangement

Options :

485584146889. 1
485584146890. 2
485584146891. 3
485584146892. 4

Question Number : 88 Question Id : 48558436723 Question Type : MCQ Option Shuffling : No Is Question Mandatory : No Calculator : None Response Time : N.A Think Time : N.A Minimum Instruction Time : 0

Correct Marks : 5 Wrong Marks : 1

Question Key Details :

Key	Value
Comprehension	MCQ

ਪ੍ਰਧਾਨ ਮੰਤਰੀ ਮੁਦਰਾ ਯੋਜਨਾ ਨੂੰ ਲਾਗੂ ਕਰਨ ਲਈ ਮੁਦਰਾ ਬੈਂਕ ਦੀ ਸਥਾਪਨਾ ਕੀਤੀ ਗਈ ਹੈ। " ਮੁਦਰਾ " ਦਾ ਅਰਥ ਹੈ?

1. ਮਾਈਕਰੋ ਯੂਨਿਟ ਵਿਕਾਸ ਪੁਨਰਵਿੱਤੀ ਐਕਟ
2. ਮਾਈਕਰੋ ਯੂਨਿਟ ਵਿਕਾਸ ਸਰਿਤ ਵੰਡ
3. ਮੱਧਮ ਇਕਾਈ ਵਿਕਾਸ ਮਾਲੀਆ ਅਲਾਟਮੈਂਟ
4. ਮਾਈਕਰੋ ਇਕਾਈ ਦੇ ਵਿਕਾਸ ਤੇ ਪੁਨਰ ਵਿੱਤੀ ਪ੍ਰਬੰਧ

Options :

485584146889. 1
485584146890. 2
485584146891. 3
485584146892. 4

Question Number : 88 Question Id : 48558436723 Question Type : MCQ Option Shuffling : No Is Question Mandatory : No Calculator : None Response Time : N.A Think Time : N.A Minimum Instruction Time : 0

Correct Marks : 5 Wrong Marks : 1

Question Key Details :

Key	Value
Comprehension	MCQ

முத்ரா (MUDRA) வங்கி பிரதான் மந்திரி முத்ரா யோజనా என்ற திட்டத்தை நிறைவேற்ற ஏற்படுத்தப்பட்டது. இதில் 'MUDRA' என்பதன் விரிவாக்கம் :

1. Micro Units Development Refinance Act
2. Micro Units Development Resource Allocation
3. Medium Unit Development Revenue Allotment
4. Micro Unit Development Refinance Arrangement

Options :

485584146889. 1
485584146890. 2
485584146891. 3
485584146892. 4

Question Number : 88 Question Id : 48558436723 Question Type : MCQ Option Shuffling : No Is Question Mandatory : No Calculator : None Response Time : N.A Think Time : N.A Minimum Instruction Time : 0

Correct Marks : 5 Wrong Marks : 1

Question Key Details :

Key	Value
Comprehension	MCQ

ప్రధానమంత్రి ముద్రా యోజన అమలు కోసం ముద్రా బ్యాంక్ ఏర్పాటు చేయబడింది. 'ముద్ర' అంటే :

1. మైక్రో యూనిట్స్ డెవలప్ మెంట్ రీఫైనాన్స్ చట్టం
2. మైక్రో యూనిట్స్ డెవలప్ మెంట్ రిసోర్స్ అలోకేషన్
3. మీడియం యూనిట్ డెవలప్ మెంట్ రెవెన్యూ అలాట్ మెంట్
4. మైక్రో యూనిట్ డెవలప్ మెంట్ రీఫైనాన్స్ అరేంజ్ మెంట్

Options :

485584146889. 1
485584146890. 2
485584146891. 3
485584146892. 4

Question Number : 88 Question Id : 48558436723 Question Type : MCQ Option Shuffling : No Is Question Mandatory : No Calculator : None Response Time : N.A Think Time : N.A Minimum Instruction Time : 0

Correct Marks : 5 Wrong Marks : 1

Question Key Details :

Key	Value
Comprehension	MCQ

مُدرا بینک (MUDRA Bank) کی تشکیل پر دھان منتری مُدرا یوجنا کو نافذ کرنے کے لئے کی گئی ہے۔ MUDRA سے کیا مراد ہے ؟

1. Micro Units Development Refinance Act
2. Micro Units Development Resource Allocation
3. Medium Unit Development Revenue Allotment
4. Micro Unit Development Refinance Arrangement

Options :

485584146889. 1
485584146890. 2
485584146891. 3
485584146892. 4

Question Number : 89 Question Id : 48558436724 Question Type : MCQ Option Shuffling : No Is Question Mandatory : No Calculator : None Response Time : N.A Think Time : N.A Minimum Instruction Time : 0

Correct Marks : 5 Wrong Marks : 1

Question Key Details :

Key	Value
Comprehension	MCQ

Match List I with List II

LIST I		LIST II	
A.	Kharif Crops	I.	Sown in October, harvested in March/April
B.	Rabi Crops	II.	Rabi Crops
C.	Wheat, Barley, Mustard etc	III.	Sown in July, harvested in October
D.	Watermelons, Moong etc	IV.	Zayad Crops

Choose the correct answer from the options given below:

1. A-IV, B-II, C-III, D-I
2. A-II, B-I, C-III, D-IV
3. A-I, B-II, C-IV, D-III
4. A-III, B-I, C-II, D-IV

Options :

485584146893. 1
485584146894. 2
485584146895. 3
485584146896. 4

Question Number : 89 Question Id : 48558436724 Question Type : MCQ Option Shuffling : No Is Question Mandatory : No Calculator : None Response Time : N.A Think Time : N.A Minimum Instruction Time : 0

Correct Marks : 5 Wrong Marks : 1

Question Key Details :

Key	Value
Comprehension	MCQ

सूची I का मिलान सूची II से कीजिए

सूची I		सूची II	
A.	खरीफ़ की फसलें	I.	अक्टूबर में बोई जाती हैं तथा मार्च/अप्रैल में काटी जाती हैं।
B.	रबी की फसलें	II.	रबी की फसलें
C.	गेहूँ, जौ, सरसों आदि	III.	जुलाई में बोई जाती है, अक्टूबर में काटी जाती है।
D.	तरबूज, मूँग आदि	IV.	ज़ायद फसलें

नीचे दिए गए विकल्पों में से सही उत्तर का चयन कीजिए:

1. A-IV, B-II, C-III, D-I
2. A-II, B-I, C-III, D-IV
3. A-I, B-II, C-IV, D-III
4. A-III, B-I, C-II, D-IV

Options :

485584146893. 1
485584146894. 2
485584146895. 3
485584146896. 4

Question Number : 89 Question Id : 48558436724 Question Type : MCQ Option Shuffling : No Is Question Mandatory : No Calculator : None Response Time : N.A Think Time : N.A Minimum Instruction Time : 0

Correct Marks : 5 Wrong Marks : 1

Question Key Details :

Key	Value
Comprehension	MCQ

তালিকা I-ৰ সৈতে তালিকা II মিলোৱা

তালিকা I		তালিকা II	
A.	খাৰিফ শস্য	I.	অক্টোবৰত সিঁচা, মাৰ্চ-এপ্ৰিলত চপোৱা শস্য
B.	ৰবি শস্য	II.	ৰবি শস্য
C.	ঘেঁহু, যৱ, সৰিয়হ ইত্যাদি	III.	জুলাইত সিঁচা, অক্টোবৰত চপোৱা শস্য
D.	তৰমুজ, মগুমাহ ইত্যাদি	IV.	জায়াড শস্য

তলৰ বিকল্পসমূহৰপৰা শুদ্ধ উত্তৰটো বাছি উলিওৱা:

1. A-IV, B-II, C-III, D-I
2. A-II, B-I, C-III, D-IV
3. A-I, B-II, C-IV, D-III
4. A-III, B-I, C-II, D-IV

Options :

485584146893. 1
485584146894. 2
485584146895. 3
485584146896. 4

Question Number : 89 Question Id : 48558436724 Question Type : MCQ Option Shuffling : No Is Question Mandatory : No Calculator : None Response Time : N.A Think Time : N.A Minimum Instruction Time : 0

Correct Marks : 5 Wrong Marks : 1

Question Key Details :

Key	Value
Comprehension	MCQ

তালিকা I এর সাথে তালিকা II মেলাও

তালিকা I		তালিকা II	
A.	খারিফ শস্য	I.	অক্টোবরের মধ্যে বপন করে মার্চ/এপ্রিলে কাটা হয়
B.	রবি শস্য	II.	রবি শস্য
C.	গম, যব সরিষা ইত্যাদি	III.	জুলাইয়ে বপন করা অক্টোবরে কাটা
D.	তরমুজ, মুগ	IV.	জাইদ ফসল

নীচের বিকল্পগুলি থেকে সঠিক উত্তর চিহ্নিত কর:

1. A-IV, B-II, C-III, D-I
2. A-II, B-I, C-III, D-IV
3. A-I, B-II, C-IV, D-III
4. A-III, B-I, C-II, D-IV

Options :

485584146893. 1
485584146894. 2
485584146895. 3
485584146896. 4

Question Number : 89 Question Id : 48558436724 Question Type : MCQ Option Shuffling : No Is Question Mandatory : No Calculator : None Response Time : N.A Think Time : N.A Minimum Instruction Time : 0

Correct Marks : 5 Wrong Marks : 1

Question Key Details :

Key	Value
Comprehension	MCQ

સૂચિ I ને સૂચિ II સાથે જોડો.

સૂચિ I		સૂચિ II	
A.	ખરીફ પાક	I.	વાવણી ઓક્ટોબરમાં કાપણી માય / એપ્રિલમાં
B.	રવી પાક	II.	રવી પાક
C.	ઘંઊ, જવ, રાઈ / સરસવ વગેરે	III.	વાવણી જુલાઈમાં, કાપણી ઓક્ટોબરમાં
D.	તળબૂચ, મગ વગેરે	IV.	ઝાયદ પાક

નીચે આપેલા વિકલ્પોમાંથી સાચો જવાબ પસંદ કરો.

1. A-IV, B-II, C-III, D-I
2. A-II, B-I, C-III, D-IV
3. A-I, B-II, C-IV, D-III
4. A-III, B-I, C-II, D-IV

Options :

485584146893. 1
485584146894. 2
485584146895. 3
485584146896. 4

Question Number : 89 Question Id : 48558436724 Question Type : MCQ Option Shuffling : No Is Question Mandatory : No Calculator : None Response Time : N.A Think Time : N.A Minimum Instruction Time : 0

Correct Marks : 5 Wrong Marks : 1

Question Key Details :

Key	Value
Comprehension	MCQ

પટ્ટી - I અನ್ನು પટ્ટી - II ર જોતે હોંદીસી:

પટ્ટી - I		પટ્ટી - II	
A.	કારીખૂં બેલેંગલુ	I.	અક્ષોબરનલ્લી મોલકે બરિસી માર્ચ/ઘપ્પીલનલ્લી કટાવુ
B.	રાબી બેલેંગલુ	II.	રાબી બેલેંગલુ
C.	ગોલેઢી, બાર્લી, સાસિવે ઇત્યાદી	III.	ઝુલ્કેનલ્લી મોલકે બરિસી, અક્ષોબરનલ્લી કટાવુ
D.	કલ્લંગઢી, હેસરુકાલુ ઇત્યાદી	IV.	ઝુલ્કેનલ્લી બેલેંગલુ

કેલેંગલેન આયેંગલેંદ સરિયાદ ઁત્તરવનુ આરિસી:

1. A-IV, B-II, C-III, D-I
2. A-II, B-I, C-III, D-IV
3. A-I, B-II, C-IV, D-III
4. A-III, B-I, C-II, D-IV

Options :

485584146893. 1
485584146894. 2
485584146895. 3
485584146896. 4

Question Number : 89 Question Id : 48558436724 Question Type : MCQ Option Shuffling : No Is Question Mandatory : No Calculator : None Response Time : N.A Think Time : N.A Minimum Instruction Time : 0

Correct Marks : 5 Wrong Marks : 1

Question Key Details :

Key	Value
Comprehension	MCQ

ചേരുംപടി ചേർക്കുക

പട്ടിക I		പട്ടിക II	
A.	ഖരിഫ് വിളകൾ	I.	ഒക്ടോബറിൽ വിതച്ച മാർച്ച് ഏപ്രിലിൽ വിളവെടുക്കുന്നു
B.	റാബി വിളകൾ	II.	റാബി വിളകൾ
C.	ഗോതമ്പ്, ബാർലി, കടുകു തുടങ്ങിയവ	III.	ജൂലായിൽ വിതച്ച ഒക്ടോബറിൽ വിളവെടുക്കുന്നു
D.	തണിമത്തൻ, മുൻഗ് തുടങ്ങിയവ	IV.	സയാർ വിളകൾ

1. A-IV, B-II, C-III, D-I
2. A-II, B-I, C-III, D-IV
3. A-I, B-II, C-IV, D-III
4. A-III, B-I, C-II, D-IV

Options :

485584146893. 1
485584146894. 2
485584146895. 3
485584146896. 4

Question Number : 89 Question Id : 48558436724 Question Type : MCQ Option Shuffling : No Is Question Mandatory : No Calculator : None Response Time : N.A Think Time : N.A Minimum Instruction Time : 0

Correct Marks : 5 Wrong Marks : 1

Question Key Details :

Key	Value
Comprehension	MCQ

यादी I व यादी II जुळवा.

यादी I		यादी II	
A.	खरीप पिके	I.	ऑक्टोबरमध्ये पेरणी, एप्रिलमध्ये कापणी
B.	रब्बी पिके	II.	रब्बी पिके
C.	गहू, सातू, मोहरी इत्यादी	III.	जुलैमध्ये पेरणी, ऑक्टोबरमध्ये कापणी
D.	कलिंगडे, मूग इत्यादी	IV.	झायाद पिके (झायाड क्रॉप्स)

खालील पर्यायांमधून योग्य पर्याय निवडा.

1. A-IV, B-II, C-III, D-I

2. A-II, B-I, C-III, D-IV

3. A-I, B-II, C-IV, D-III

4. A-III, B-I, C-II, D-IV

Options :

485584146893. 1

485584146894. 2

485584146895. 3

485584146896. 4

Question Number : 89 Question Id : 48558436724 Question Type : MCQ Option Shuffling : No Is Question Mandatory : No Calculator : None Response Time : N.A Think Time : N.A Minimum Instruction Time : 0

Correct Marks : 5 Wrong Marks : 1

Question Key Details :

Key	Value
Comprehension	MCQ

ତାଲିକା I ସହିତ ତାଲିକା II କୁ ମିଳାନ୍ତୁ

ତାଲିକା I		ତାଲିକା II	
A.	ଖରିଫ ଫସଲ	I.	ଅକ୍ଟୋବର ରେ ରୋପଣ, ମାର୍ଚ୍ଚ/ଏପ୍ରିଲ ରେ ଅମଳ
B.	ରବି ଫସଲ	II.	ରବି ଫସଲ
C.	ଗହମ, ବାଲି, ସୋରିଷ ଇତ୍ୟାଦି	III.	ଜୁଲାଇରେ ରୋପଣ, ଅକ୍ଟୋବର ରେ ଅମଳ
D.	ତରଭୁଜ ଓ ମୁଗ ଇତ୍ୟାଦି	IV.	ଜୟାଦ ଫସଲ (Zayad Crops)

ନିମ୍ନ ବିକଳ୍ପ ଗୁଡ଼ିକରୁ ସଠିକ୍ ଉତ୍ତରଟି ଚିହ୍ନଟ କରନ୍ତୁ:

1. A-IV, B-II, C-III, D-I

2. A-II, B-I, C-III, D-IV

3. A-I, B-II, C-IV, D-III

4. A-III, B-I, C-II, D-IV

Options :

485584146893. 1

485584146894. 2
485584146895. 3
485584146896. 4

Question Number : 89 Question Id : 48558436724 Question Type : MCQ Option Shuffling : No Is Question Mandatory : No Calculator : None Response Time : N.A Think Time : N.A Minimum Instruction Time : 0

Correct Marks : 5 Wrong Marks : 1

Question Key Details :

Key	Value
Comprehension	MCQ

ਸੂਚੀ I ਦਾ ਸੂਚੀ II ਨਾਲ ਮਿਲਾਣ ਕਰੋ:

ਸੂਚੀ I		ਸੂਚੀ II	
A.	ਖਰੀਫ਼ ਦੀ ਪੈਦਾਵਾਰ	I.	ਅਕਤੂਬਰ ਵਿੱਚ ਬਿਜਾਈ, ਮਾਰਚ / ਐਪ੍ਰਲ ਵਿੱਚ ਕਟਾਈ
B.	ਰਾਬੀ ਦੀ ਪੈਦਾਵਾਰ	II.	ਰਾਬੀ ਦੀ ਪੈਦਾਵਾਰ
C.	ਕਣਕ, ਜੌਂ, ਸਰੋਂ ਆਦਿ	III.	ਜੁਲਾਈ ਵਿੱਚ ਬਿਜਾਈ, ਅਕਤੂਬਰ ਵਿੱਚ ਕਟਾਈ
D.	ਤਰਬੂਜ਼, ਮੂੰਗ ਆਦਿ	IV.	ਜੁਲਾਈ ਦੀ ਪੈਦਾਵਾਰ

ਹੇਠਾਂ ਦਿੱਤੇ ਵਿਕਲਪਾਂ ਵਿੱਚੋਂ ਸਹੀ ਉੱਤਰ ਚੁਣੋ:

1. A-IV, B-II, C-III, D-I
2. A-II, B-I, C-III, D-IV
3. A-I, B-II, C-IV, D-III
4. A-III, B-I, C-II, D-IV

Options :

485584146893. 1
485584146894. 2
485584146895. 3
485584146896. 4

Question Number : 89 Question Id : 48558436724 Question Type : MCQ Option Shuffling : No Is Question Mandatory : No Calculator : None Response Time : N.A Think Time : N.A Minimum Instruction Time : 0

Correct Marks : 5 Wrong Marks : 1

Question Key Details :

Key	Value
Comprehension	MCQ

பட்டியல் I ஐ பட்டியல் II உடன் பொருத்துக

பட்டியல் I		பட்டியல் II	
A.	காரிப் பயிர்கள்	I.	அக்டோபரில் விதைக்கப்பட்டு மார்ச்/ஏப்ரலில் அறுவடை செய்யப்படும்
B.	ராபி பயிர்கள்	II.	ராபி பயிர்கள்
C.	கோதுமை, பார்லி, கடுகு போன்றவை	III.	ஜூலையில் விதைக்கப்பட்டு அக்டோபரில் அறுவடை செய்யப்படும்
D.	தர்பூசணி, உளுந்து போன்றவை	IV.	ஜயத் பயிர்கள்

கீழே தரப்பட்டுள்ள வாய்ப்புகளில் இருந்து சரியான விடையைத் தேர்ந்தெடுக்கவும்:

1. A-IV, B-II, C-III, D-I
2. A-II, B-I, C-III, D-IV
3. A-I, B-II, C-IV, D-III
4. A-III, B-I, C-II, D-IV

Options :

485584146893. 1
485584146894. 2
485584146895. 3
485584146896. 4

**Question Number : 89 Question Id : 48558436724 Question Type : MCQ Option Shuffling : No Is Question Mandatory :
No Calculator : None Response Time : N.A Think Time : N.A Minimum Instruction Time : 0**

Correct Marks : 5 Wrong Marks : 1

Question Key Details :

Key	Value
Comprehension	MCQ

జతపరచండి

జాబితా I		జాబితా II	
A.	కరిఫ్ పంటలు	I.	అర్జోబరులో నాటుతారు, మార్చి/ ఏప్రిల్లో పండిస్తారు
B.	రబీ పంటలు	II.	రబీ పంటలు
C.	గోధుమ, బార్లి, ఆవాలు మొదలగునవి	III.	జూలైలో నాటుతారు, అర్జోబర్లో పండిస్తారు
D.	పుచ్చకాయలు, పెసర మొదలైనవి	IV.	జయాద్ పంటలు

సరైన సమాధానం ఎన్నుకోండి

1. A-IV, B-II, C-III, D-I
2. A-II, B-I, C-III, D-IV
3. A-I, B-II, C-IV, D-III
4. A-III, B-I, C-II, D-IV

Options :

485584146893. 1
485584146894. 2
485584146895. 3
485584146896. 4

Question Number : 89 Question Id : 48558436724 Question Type : MCQ Option Shuffling : No Is Question Mandatory : No Calculator : None Response Time : N.A Think Time : N.A Minimum Instruction Time : 0

Correct Marks : 5 Wrong Marks : 1

Question Key Details :

Key	Value
Comprehension	MCQ

فہرست II	فہرست I
I. اکتوبر میں بوئی جاتی ہے اور مارچ یا اپریل میں کاٹی جاتی ہیں	A. خریف فصلیں
II. ربی فصلیں	B. ربی کی فصلیں
III. جولائی میں ہونا، اکتوبر میں کاٹنا	C. گندم، بارلے اور سرسوں
IV. زید فصلیں	D. مونگا، خربوزہ وغیرہ

صحیح جواب چنیں :

1. A-IV, B-II, C-III, D-I
2. A-II, B-I, C-III, D-IV
3. A-I, B-II, C-IV, D-III
4. A-III, B-I, C-II, D-IV

Options :

485584146893. 1
485584146894. 2
485584146895. 3
485584146896. 4

Question Number : 90 Question Id : 48558436725 Question Type : MCQ Option Shuffling : No Is Question Mandatory : No Calculator : None Response Time : N.A Think Time : N.A Minimum Instruction Time : 0

Correct Marks : 5 Wrong Marks : 1

Question Key Details :

Key	Value
Comprehension	MCQ

First Indian to win a Nobel prize is :

1. Rabindra Nath Tagore
2. C. V. Raman
3. Mother Theresa
4. Dr. H. Khorana

Options :

485584146897. 1
485584146898. 2
485584146899. 3

485584146900. 4

Question Number : 90 Question Id : 48558436725 Question Type : MCQ Option Shuffling : No Is Question Mandatory : No Calculator : None Response Time : N.A Think Time : N.A Minimum Instruction Time : 0

Correct Marks : 5 Wrong Marks : 1

Question Key Details :

Key	Value
Comprehension	MCQ

नोबेल पुरस्कार प्राप्त करने वाले प्रथम भारतीय है:

1. रबीन्द्रनाथ टैगोर
2. सी.वी. रमन
3. मदर टेरेसा
4. डॉ. एच. खुराना

Options :

485584146897. 1
485584146898. 2
485584146899. 3
485584146900. 4

Question Number : 90 Question Id : 48558436725 Question Type : MCQ Option Shuffling : No Is Question Mandatory : No Calculator : None Response Time : N.A Think Time : N.A Minimum Instruction Time : 0

Correct Marks : 5 Wrong Marks : 1

Question Key Details :

Key	Value
Comprehension	MCQ

নোবেল পুরস্কার পোৱা প্রথমজন ভাৰতীয় হ'ল:

1. ৰবীন্দ্রনাথ ঠাকুৰ
2. চি.ভি. ৰমন
3. মাদাৰ টেৰেছা
4. ড. এইছ খুৰানা

Options :

485584146897. 1
485584146898. 2
485584146899. 3
485584146900. 4

Question Number : 90 Question Id : 48558436725 Question Type : MCQ Option Shuffling : No Is Question Mandatory : No Calculator : None Response Time : N.A Think Time : N.A Minimum Instruction Time : 0

Correct Marks : 5 Wrong Marks : 1

Question Key Details :

Key	Value
Comprehension	MCQ

প্রথম ভারতীয় যিনি নোবেল প্রাইজ পেয়েছেন :

1. রবীন্দ্রনাথ ঠাকুর
2. সি. ভি রমন
3. মাদার টেরেসা
4. Dr. এইচ. খোরানা

Options :

485584146897. 1
485584146898. 2
485584146899. 3
485584146900. 4

Question Number : 90 Question Id : 48558436725 Question Type : MCQ Option Shuffling : No Is Question Mandatory : No Calculator : None Response Time : N.A Think Time : N.A Minimum Instruction Time : 0

Correct Marks : 5 Wrong Marks : 1

Question Key Details :

Key	Value
Comprehension	MCQ

প্রথম ভারতীয় জে নোবেল প্রাইজ বিজিতা ছে তে :

1. রবীন্দ্রনাথ ঠাকুর
2. সি. ভি রমন
3. মাদার টেরেসা
4. ডি এইচ খোরানা

Options :

485584146897. 1
485584146898. 2
485584146899. 3
485584146900. 4

Question Number : 90 Question Id : 48558436725 Question Type : MCQ Option Shuffling : No Is Question Mandatory : No Calculator : None Response Time : N.A Think Time : N.A Minimum Instruction Time : 0

Correct Marks : 5 Wrong Marks : 1

Question Key Details :

Key	Value
Comprehension	MCQ

ಮೊಟ್ಟ ಮೊದಲಿಗೆ ನೋಬೆಲ್ ಪ್ರಶಸ್ತಿ ಗೆದ್ದ ಭಾರತೀಯ:

1. ರವೀಂದ್ರನಾಥ ಟ್ಯಾಗೋರ್
2. ಸಿ.ವಿ. ರಾಮನ್
3. ಮದರ್ ಥೆರೆಸಾ
4. ಡಾ. ಎಚ್. ಖೊರಾನಾ

Options :

485584146897. 1
485584146898. 2
485584146899. 3
485584146900. 4

Question Number : 90 Question Id : 48558436725 Question Type : MCQ Option Shuffling : No Is Question Mandatory : No Calculator : None Response Time : N.A Think Time : N.A Minimum Instruction Time : 0

Correct Marks : 5 Wrong Marks : 1

Question Key Details :

Key	Value
Comprehension	MCQ

ಗೋಂಬಲ ಸಮಾನಂ ಗೇಡಿಯ ಅರಿಯ ಡಾರತಿಯನಿ

1. ರಬೀಂದ್ರ ನಾಥ್ ಟಾಗೋರ್
2. ಸಿ.ವಿ. ರಾಮನ್
3. ಮದರ್ ಥೆರೆಸಾ
4. Dr .H. ಖೊರಾನಾ

Options :

485584146897. 1
485584146898. 2
485584146899. 3
485584146900. 4

Question Number : 90 Question Id : 48558436725 Question Type : MCQ Option Shuffling : No Is Question Mandatory : No Calculator : None Response Time : N.A Think Time : N.A Minimum Instruction Time : 0

Correct Marks : 5 Wrong Marks : 1

Question Key Details :

Key	Value
Comprehension	MCQ

नोबेल पारितोषिक मलळणारे पहले भारतीय -

1. रवेंद्रनाथ टागोर
2. सी. व्ही. रमण
3. मदर टेरेसा
4. डॉ. एच. खुराणा

Options :

485584146897. 1
485584146898. 2
485584146899. 3
485584146900. 4

Question Number : 90 Question Id : 48558436725 Question Type : MCQ Option Shuffling : No Is Question Mandatory : No Calculator : None Response Time : N.A Think Time : N.A Minimum Instruction Time : 0

Correct Marks : 5 Wrong Marks : 1

Question Key Details :

Key	Value
Comprehension	MCQ

नोबेल पुरस्कार विजेता सर्वप्रथम भारतीय कौन थे?

1. रवेंद्रनाथ टैगोर
2. सी. व्ही. रमण
3. मदर टेरेसा
4. डॉ. एच. खुराणा

Options :

485584146897. 1
485584146898. 2
485584146899. 3
485584146900. 4

Question Number : 90 Question Id : 48558436725 Question Type : MCQ Option Shuffling : No Is Question Mandatory : No Calculator : None Response Time : N.A Think Time : N.A Minimum Instruction Time : 0

Correct Marks : 5 Wrong Marks : 1

Question Key Details :

Key	Value
Comprehension	MCQ

ਨੋਬਲ ਪ੍ਰਾਇਜ਼ ਜਿੱਤਨ ਵਾਲਾ ਪਹਿਲਾ ਭਾਰਤੀ ਹੈ?

1. ਰਵਿੰਦਰ ਨਾਥ ਟੈਗੋਰ
2. ਸੀ. ਵੀ. ਰਮਨ
3. ਮਦਰ ਟੇਰੇਸਾ
4. ਡਾ: ਐਚ ਖੇਰਾਨਾ

Options :

485584146897. 1
485584146898. 2
485584146899. 3
485584146900. 4

Question Number : 90 Question Id : 48558436725 Question Type : MCQ Option Shuffling : No Is Question Mandatory : No Calculator : None Response Time : N.A Think Time : N.A Minimum Instruction Time : 0

Correct Marks : 5 Wrong Marks : 1

Question Key Details :

Key	Value
Comprehension	MCQ

ਨੋਬਲ ਪ੍ਰਾਇਜ਼ ਜਿੱਤਨ ਵਾਲਾ ਪਹਿਲਾ ਭਾਰਤੀ ਹੈ?

1. ਰਵਿੰਦਰ ਨਾਥ ਟੈਗੋਰ
2. ਸੀ. ਵੀ. ਰਮਨ
3. ਮਦਰ ਟੇਰੇਸਾ
4. ਡਾ: ਐਚ ਖੇਰਾਨਾ

Options :

485584146897. 1
485584146898. 2
485584146899. 3
485584146900. 4

Question Number : 90 Question Id : 48558436725 Question Type : MCQ Option Shuffling : No Is Question Mandatory : No Calculator : None Response Time : N.A Think Time : N.A Minimum Instruction Time : 0

Correct Marks : 5 Wrong Marks : 1

Question Key Details :

Key	Value
Comprehension	MCQ

నోబెల్ బహుమతిని గెలుచుకున్న మొదటి భారతీయుడు :

1. రబీంద్రనాథ్ ఠాగూర్
2. సి.వి.రామన్
3. మదర్ థెరిసా
4. డా. హెచ్. కొరాన

Options :

485584146897. 1
485584146898. 2
485584146899. 3
485584146900. 4

Question Number : 90 Question Id : 48558436725 Question Type : MCQ Option Shuffling : No Is Question Mandatory : No Calculator : None Response Time : N.A Think Time : N.A Minimum Instruction Time : 0

Correct Marks : 5 Wrong Marks : 1

Question Key Details :

Key	Value
Comprehension	MCQ

پہلا ہندوستانی جس نے نوبل انعام حاصل کیا ؟

1. رابندر ناتھ ٹیگور
2. سی وی رمن
3. مدر ٹیریس
4. ڈاکٹر ایچ کھورانا

Options :

485584146897. 1
485584146898. 2
485584146899. 3
485584146900. 4

Question Number : 91 Question Id : 48558436726 Question Type : MCQ Option Shuffling : No Is Question Mandatory : No Calculator : None Response Time : N.A Think Time : N.A Minimum Instruction Time : 0

Correct Marks : 5 Wrong Marks : 1

Question Key Details :

Key	Value
Comprehension	MCQ

Choose one number which is similar to numbers in the given set:

8, 1331, 4913

1. 121

2. 2197

3. 64

4. 81

Options :

485584146901. 1

485584146902. 2

485584146903. 3

485584146904. 4

Question Number : 91 Question Id : 48558436726 Question Type : MCQ Option Shuffling : No Is Question Mandatory : No Calculator : None Response Time : N.A Think Time : N.A Minimum Instruction Time : 0

Correct Marks : 5 Wrong Marks : 1

Question Key Details :

Key	Value
Comprehension	MCQ

प्रश्न में दिए गए विकल्पों में से उस संख्या को चुनिए जो दिए गए सेट में संख्याओं के समान हो।

8, 1331, 4913

1. 121

2. 2197

3. 64

4. 81

Options :

485584146901. 1

485584146902. 2

485584146903. 3

485584146904. 4

Question Number : 91 Question Id : 48558436726 Question Type : MCQ Option Shuffling : No Is Question Mandatory : No Calculator : None Response Time : N.A Think Time : N.A Minimum Instruction Time : 0

Correct Marks : 5 Wrong Marks : 1

Question Key Details :

Key	Value
Comprehension	MCQ

প্রশ্নত দিয়া সংখ্যাসংহতিৰ সৈতে সদৃশ সম্পৰ্ক বহন কৰা সংখ্যাটো তলত দিয়া বিকল্পবোৰৰপৰা চিনাক্ত কৰা:

8, 1331, 4913

1. 121

2. 2197

3. 64

4. 81

Options :

485584146901. 1

485584146902. 2

485584146903. 3

485584146904. 4

Question Number : 91 Question Id : 48558436726 Question Type : MCQ Option Shuffling : No Is Question Mandatory : No Calculator : None Response Time : N.A Think Time : N.A Minimum Instruction Time : 0

Correct Marks : 5 Wrong Marks : 1

Question Key Details :

Key	Value
Comprehension	MCQ

প্রশ্নের সঙ্গে সম্পর্কযুক্ত শব্দগুলোকে বিকল্প হিসাবে নিম্ন প্রদত্ত শব্দের সঙ্গে মেলাও।

8, 1331, 4913

1. 121

2. 2197

3. 64

4. 81

Options :

485584146901. 1

485584146902. 2

485584146903. 3

485584146904. 4

Question Number : 91 Question Id : 48558436726 Question Type : MCQ Option Shuffling : No Is Question Mandatory : No Calculator : None Response Time : N.A Think Time : N.A Minimum Instruction Time : 0

Correct Marks : 5 Wrong Marks : 1

Question Key Details :

Key	Value
Comprehension	MCQ

પ્રશ્નમાં આપેલ પદ સાથે સંબંધ ધરાવતા વિકલ્પો માં આપેલા પદ ને જોડો.

8, 1331, 4913

1. 121

2. 2197

3. 64

4. 81

Options :

485584146901. 1

485584146902. 2

485584146903. 3

485584146904. 4

Question Number : 91 Question Id : 48558436726 Question Type : MCQ Option Shuffling : No Is Question Mandatory : No Calculator : None Response Time : N.A Think Time : N.A Minimum Instruction Time : 0

Correct Marks : 5 Wrong Marks : 1

Question Key Details :

Key	Value
Comprehension	MCQ

આયુર્વેદમાં આપેલ પદ સાથે સંબંધ ધરાવતા વિકલ્પો માં આપેલા પદ ને જોડો:

8, 1331, 4913

1. 121

2. 2197

3. 64

4. 81

Options :

485584146901. 1

485584146902. 2

485584146903. 3

485584146904. 4

Question Number : 91 Question Id : 48558436726 Question Type : MCQ Option Shuffling : No Is Question Mandatory : No Calculator : None Response Time : N.A Think Time : N.A Minimum Instruction Time : 0

Correct Marks : 5 Wrong Marks : 1

Question Key Details :

Key	Value
Comprehension	MCQ

ചുവടെ തന്നിട്ടുള്ള സൂചികളിൽ 8 , 1331 , 4913 എന്നീ സംഖ്യകളുമായി ബന്ധമുള്ളത് ഏത് ?

1. 121
2. 2197
3. 64
4. 81

Options :

485584146901. 1
485584146902. 2
485584146903. 3
485584146904. 4

Question Number : 91 Question Id : 48558436726 Question Type : MCQ Option Shuffling : No Is Question Mandatory : No Calculator : None Response Time : N.A Think Time : N.A Minimum Instruction Time : 0

Correct Marks : 5 Wrong Marks : 1

Question Key Details :

Key	Value
Comprehension	MCQ

खालील प्रश्नातील दिलेल्या शब्दाचा पर्यायांतील शब्दांशी असणारा संबंध जुळवा.

8, 1331, 4913

1. 121
2. 2197
3. 64
4. 81

Options :

485584146901. 1
485584146902. 2
485584146903. 3
485584146904. 4

Question Number : 91 Question Id : 48558436726 Question Type : MCQ Option Shuffling : No Is Question Mandatory : No Calculator : None Response Time : N.A Think Time : N.A Minimum Instruction Time : 0

Correct Marks : 5 Wrong Marks : 1

Question Key Details :

Key	Value
Comprehension	MCQ

ବିକଳରେ ପ୍ରଦତ୍ତ ସଂଖ୍ୟା ସହିତ ପ୍ରଶ୍ନରେ ଦିଆଯାଇଥିବା ସଂଖ୍ୟାମାନଙ୍କ ସହିତ ସମ୍ବନ୍ଧ ସ୍ଥାପିତ କରି ମିଳାନ୍ତୁ

8, 1331, 4913

1. 121

2. 2197

3. 64

4. 81

Options :

485584146901. 1

485584146902. 2

485584146903. 3

485584146904. 4

Question Number : 91 Question Id : 48558436726 Question Type : MCQ Option Shuffling : No Is Question Mandatory : No Calculator : None Response Time : N.A Think Time : N.A Minimum Instruction Time : 0

Correct Marks : 5 Wrong Marks : 1

Question Key Details :

Key	Value
Comprehension	MCQ

ਵਿਕਲਪਾਂ ਵਿੱਚ ਦਿੱਤੇ ਸ਼ਬਦਾਂ ਦਾ ਮੇਲ ਪ੍ਰਸ਼ਨ ਵਿੱਚ ਸਬੰਧ ਰੱਖਣ ਵਾਲੇ ਸ਼ਬਦਾਂ ਨਾਲ ਕਰੋ?

8, 1331, 4913

1. 121

2. 2197

3. 64

4. 81

Options :

485584146901. 1

485584146902. 2

485584146903. 3

485584146904. 4

Question Number : 91 Question Id : 48558436726 Question Type : MCQ Option Shuffling : No Is Question Mandatory : No Calculator : None Response Time : N.A Think Time : N.A Minimum Instruction Time : 0

Correct Marks : 5 Wrong Marks : 1

Question Key Details :

Key	Value
Comprehension	MCQ

பின்வருபவனவற்றுடன் பொருந்தும் எண்ணை கொடுக்கப்பட்டுள்ள வாய்ப்புகளில் இருந்து தேர்ந்தெடுக்கவும் :

8, 1331, 4913

1. 121

2. 2197

3. 64

4. 81

Options :

485584146901. 1

485584146902. 2

485584146903. 3

485584146904. 4

Question Number : 91 Question Id : 48558436726 Question Type : MCQ Option Shuffling : No Is Question Mandatory : No Calculator : None Response Time : N.A Think Time : N.A Minimum Instruction Time : 0

Correct Marks : 5 Wrong Marks : 1

Question Key Details :

Key	Value
Comprehension	MCQ

ప్రశ్నలోని సంఖ్యలతో సంబంధం ఉన్న సంఖ్యను ఎంపికలలో గుర్తించండి :

8, 1331, 4913

1. 121

2. 2197

3. 64

4. 81

Options :

485584146901. 1

485584146902. 2

485584146903. 3

485584146904. 4

Question Number : 91 Question Id : 48558436726 Question Type : MCQ Option Shuffling : No Is Question Mandatory : No Calculator : None Response Time : N.A Think Time : N.A Minimum Instruction Time : 0

Correct Marks : 5 Wrong Marks : 1

Question Key Details :

Key	Value
Comprehension	MCQ

1. 121

2. 2197

3. 64

4. 81

Options :

485584146901. 1

485584146902. 2

485584146903. 3

485584146904. 4

Question Number : 92 Question Id : 48558436727 Question Type : MCQ Option Shuffling : No Is Question Mandatory : No Calculator : None Response Time : N.A Think Time : N.A Minimum Instruction Time : 0

Correct Marks : 5 Wrong Marks : 1

Question Key Details :

Key	Value
Comprehension	MCQ

Rohit travels 8 km towards south. Then he turns to the right and walks 4 km. He again turns to his right and moves 8 km forward. How far is he from the starting point ?

1. 7 km

2. 6 km

3. 8 km

4. 4 km

Options :

485584146905. 1

485584146906. 2

485584146907. 3

485584146908. 4

Question Number : 92 Question Id : 48558436727 Question Type : MCQ Option Shuffling : No Is Question Mandatory : No Calculator : None Response Time : N.A Think Time : N.A Minimum Instruction Time : 0

Correct Marks : 5 Wrong Marks : 1

Question Key Details :

Key	Value
Comprehension	MCQ

रोहित दक्षिण दिशा की तरफ 8 km यात्रा करता है। फिर वो दाएँ मुड़ कर 4 km पैदल चलता है। वो फिर अपनी दाई तरफ मुड़कर 8 km आगे जाता है। वो अपनी यात्रा प्रारम्भ करने के बिन्दु से कितनी दूर है:

1. 7 km
2. 6 km
3. 8 km
4. 4 km

Options :

485584146905. 1
485584146906. 2
485584146907. 3
485584146908. 4

Question Number : 92 Question Id : 48558436727 Question Type : MCQ Option Shuffling : No Is Question Mandatory : No Calculator : None Response Time : N.A Think Time : N.A Minimum Instruction Time : 0

Correct Marks : 5 Wrong Marks : 1

Question Key Details :

Key	Value
Comprehension	MCQ

ৰোহিতে দক্ষিণ দিশত 8 km খোজকাঢ়ি আগুৱাই গ'ল। তাৰ পিছত তেওঁ সোঁফালে ঘূৰি আৰু 4 km গ'ল। তাৰ পিছত আকৌ সোঁফালে ঘূৰি খোজকাঢ়ি 8 km আগুৱাই গ'ল। আৰম্ভণিৰ স্থানৰপৰা তেওঁ এতিয়া কিমান দূৰত আছে ?

1. 7 km
2. 6 km
3. 8 km
4. 4 km

Options :

485584146905. 1
485584146906. 2
485584146907. 3
485584146908. 4

Question Number : 92 Question Id : 48558436727 Question Type : MCQ Option Shuffling : No Is Question Mandatory : No Calculator : None Response Time : N.A Think Time : N.A Minimum Instruction Time : 0

Correct Marks : 5 Wrong Marks : 1

Question Key Details :

Key	Value
Comprehension	MCQ

રોહિત દક્ષિણ દિકે 8 કિમિ ભ્રમન કરેન। પઠે ડાન દિકે ઘુરે 4 કિમિ હાંટે, સે આવાર ડાનદિકે ઘુરે ંવં 8 કિમિ ંગિયે યા઱। શુરુર બિન્દુ થેકે સે કત દુરે આહે ?

1. 7 કિમિ
2. 6 કિમિ
3. 8 કિમિ
4. 4 કિમિ

Options :

485584146905. 1
485584146906. 2
485584146907. 3
485584146908. 4

Question Number : 92 Question Id : 48558436727 Question Type : MCQ Option Shuffling : No Is Question Mandatory : No Calculator : None Response Time : N.A Think Time : N.A Minimum Instruction Time : 0

Correct Marks : 5 Wrong Marks : 1

Question Key Details :

Key	Value
Comprehension	MCQ

રોહિત 8 કિમિ. દક્ષિણ તરફ પ્રયાસ કરે છે. પછી તે જમણી બાજુ 4 કિમિ. યાવે છે. ત્યાર બાદ તે ફરી જમણી બાજુ યાવે છે અને 8 કિમિ. આગળ વધે છે. તો તે શરૂઆતના બિંદુ કેટલે દુર પહોચ્યો હશે ?

1. 7 km
2. 6 km
3. 8 km
4. 4 km

Options :

485584146905. 1
485584146906. 2
485584146907. 3
485584146908. 4

Question Number : 92 Question Id : 48558436727 Question Type : MCQ Option Shuffling : No Is Question Mandatory : No Calculator : None Response Time : N.A Think Time : N.A Minimum Instruction Time : 0

Correct Marks : 5 Wrong Marks : 1

Question Key Details :

Key	Value
Comprehension	MCQ

രോഹിതനു 8 km ദക്ഷിണಕ್ಕೆ പ്രയാണിസുതാനെ. നಂತര അവനു ಬಲಕ್ಕೆ ತിರುಗಿ 4 km നಡೆಯുതാനെ. അവനു
പുനഃ ಬಲಕ್ಕೆ തിರುಗി 8 km ಮುಂದಕ್ಕೆ ಹೋಗുതാനെ. ಪ್ರಾರಂಭಿಕ ಸ್ಥಳದಿಂದ അവനു ಎಷ್ಟು
ದುരದಲ್ಲಿದ್ದಾನെ?

1. 7 km
2. 6 km
3. 8 km
4. 4 km

Options :

485584146905. 1
485584146906. 2
485584146907. 3
485584146908. 4

**Question Number : 92 Question Id : 48558436727 Question Type : MCQ Option Shuffling : No Is Question Mandatory :
No Calculator : None Response Time : N.A Think Time : N.A Minimum Instruction Time : 0**

Correct Marks : 5 Wrong Marks : 1

Question Key Details :

Key	Value
Comprehension	MCQ

തെക്ക് ദിശയിലേക്ക് 8 km സഞ്ചരിച്ച രോഹിത് ,അവിടുന്ന് വലത്തോട്ട് തിരിഞ്ഞ് 4
km സഞ്ചരിച്ചു . വീണ്ടും വലത്തോട്ട് തിരിഞ്ഞ് 8 km സഞ്ചരിച്ചു. എങ്കിൽ ആരംഭ
സ്ഥലത്ത് നിന്നും ഇപ്പോൾ എത്ര ദൂരെയാണ് ?

1. 7 km
2. 6 km
3. 8 km
4. 4 km

Options :

485584146905. 1
485584146906. 2
485584146907. 3
485584146908. 4

**Question Number : 92 Question Id : 48558436727 Question Type : MCQ Option Shuffling : No Is Question Mandatory :
No Calculator : None Response Time : N.A Think Time : N.A Minimum Instruction Time : 0**

Correct Marks : 5 Wrong Marks : 1

Question Key Details :

Key	Value
Comprehension	MCQ

रोहितने दक्षिणेस ८ कि.मी. प्रवास केला. नंतर उजवीकडे वळून तो ४ कि.मी. चालला. पुन्हा उजवीकडे वळून तो ८ कि.मी पुढे गेला. तर तो मूळ स्थानापासून किती अंतरावर आहे?

1. 7 कि.मी
2. 6 कि.मी
3. 8 कि.मी
4. 4 कि.मी

Options :

485584146905. 1
485584146906. 2
485584146907. 3
485584146908. 4

Question Number : 92 Question Id : 48558436727 Question Type : MCQ Option Shuffling : No Is Question Mandatory : No Calculator : None Response Time : N.A Think Time : N.A Minimum Instruction Time : 0

Correct Marks : 5 Wrong Marks : 1

Question Key Details :

Key	Value
Comprehension	MCQ

ରୋହିତ ଦକ୍ଷିଣକୁ ୮ କିମି ଯାଏ। ତାପରେ ସେ ଡାହାଣ ପଟକୁ ବୁଲି ୪ କିମି ଚାଲିଚାଲି ଯାଏ। ତାପରେ ପୁଣିଥରେ ଡାହାଣକୁ ବୁଲି ୮ କିମି ଆଗକୁ ଯାଏ। ତେବେ ସେ ଆରମ୍ଭ ବିନ୍ଦୁରୁ କେତେ ଦୂରରେ ଅଛି?

1. 7 କିମି
2. 6 କିମି
3. 8 କିମି
4. 4 କିମି

Options :

485584146905. 1
485584146906. 2
485584146907. 3
485584146908. 4

Question Number : 92 Question Id : 48558436727 Question Type : MCQ Option Shuffling : No Is Question Mandatory : No Calculator : None Response Time : N.A Think Time : N.A Minimum Instruction Time : 0

Correct Marks : 5 Wrong Marks : 1

Question Key Details :

Key	Value
Comprehension	MCQ

ਰੋਹਿਤ ਦੱਖਣ ਵੱਲ 8 km ਦਾ ਸਫ਼ਰ ਤੈਅ ਕਰਦਾ ਹੈ। ਫਿਰ ਉਹ ਸੱਜੇ ਪਾਸੇ ਮੁੜਦਾ ਹੈ ਅਤੇ 4 km ਤੁਰਦਾ ਹੈ। ਉਹ ਦੁਬਾਰਾ ਆਪਣੇ ਸੱਜੇ ਪਾਸੇ ਮੁੜਦਾ ਹੈ ਅਤੇ 8 km ਅੱਗੇ ਵੱਧਦਾ ਹੈ। ਉਹ ਸ਼ੁਰੂਆਤੀ ਬਿੰਦੂ ਤੋਂ ਕਿੰਨੀ ਦੂਰ ਹੈ?

1. 7 km
2. 6 km
3. 8 km
4. 4 km

Options :

485584146905. 1
485584146906. 2
485584146907. 3
485584146908. 4

Question Number : 92 Question Id : 48558436727 Question Type : MCQ Option Shuffling : No Is Question Mandatory : No Calculator : None Response Time : N.A Think Time : N.A Minimum Instruction Time : 0

Correct Marks : 5 Wrong Marks : 1

Question Key Details :

Key	Value
Comprehension	MCQ

ਰੋਹਾਹੀਤਿ ਤੇਹਰੁ ਨੋਆਕਿ 8 km ਪਯਣੀਕਿਹਾਰੰ. ਪਿੰਪੁ ਅਵਰੰ ਵਲਤੁਪੁਰਮੰ ਤਿਰੁਮਪਿ 4 km ਨੁਦਕਿਹਾਰੰ. ਮੀਂਡੁਮੰ ਅਵਰੰ ਵਲਤੁ ਪਕਕਮਾਕ ਤਿਰੁਮਪਿ 8 km ਮੁਨੰਨੋਆਕਿ ਨਕਰਕਿਹਾਰੰ. ਇਪੁਪੋਥੁ ਅਵਰੰ ਆਰੰਮਪ ਨਿਲੈਯਿਲੰ ਇਰੁਨੁਤੁ ਈਵਵਲਵੁ ਤੋਠੈਲਵਿਲੰ ਊਲੰਗਾਰੰ?

1. 7 km
2. 6 km
3. 8 km
4. 4 km

Options :

485584146905. 1
485584146906. 2
485584146907. 3
485584146908. 4

Question Number : 92 Question Id : 48558436727 Question Type : MCQ Option Shuffling : No Is Question Mandatory : No Calculator : None Response Time : N.A Think Time : N.A Minimum Instruction Time : 0

Correct Marks : 5 Wrong Marks : 1

Question Key Details :

Key	Value
Comprehension	MCQ

రోహిత్ దక్షిణం వైపు 8 కి.మీ ప్రయాణించాడు. అప్పుడు అతను కుడి వైపుకు తిరిగి 4 కి.మీ నడిచాడు. మళ్ళీ తన కుడివైపుకు తిరిగి 8 కి.మీ ముందుకు కదులుతాడు. అతను ప్రారంభ స్థానం నుండి ఎంత దూరంలో ఉన్నాడు.

1. 7 km
2. 6 km
3. 8 km
4. 4 km

Options :

485584146905. 1
485584146906. 2
485584146907. 3
485584146908. 4

Question Number : 92 Question Id : 48558436727 Question Type : MCQ Option Shuffling : No Is Question Mandatory : No Calculator : None Response Time : N.A Think Time : N.A Minimum Instruction Time : 0

Correct Marks : 5 Wrong Marks : 1

Question Key Details :

Key	Value
Comprehension	MCQ

روبت جنوب کی سمت 8 کلومیٹر چلتا ہے۔ پھر وہ دائیں مڑتا ہے اور 4 کلومیٹر چلتا ہے۔ وہ دوبارہ بائیں طرف مڑتا ہے اور سیدھا 8 کلومیٹر چلتا ہے۔ وہ ابتدائی نقطے سے کتنا دور ہے؟

1. 7 km
2. 6 km
3. 8 km
4. 4 km

Options :

485584146905. 1
485584146906. 2
485584146907. 3
485584146908. 4

Question Number : 93 Question Id : 48558436728 Question Type : MCQ Option Shuffling : No Is Question Mandatory : No Calculator : None Response Time : N.A Think Time : N.A Minimum Instruction Time : 0

Correct Marks : 5 Wrong Marks : 1

Question Key Details :

Key	Value
Comprehension	MCQ

Who among A, B, C, D and E are shortest ?

- I. D is shorter than E, but taller than C.
- II. B is not as tall as A but taller than E.

Give answer :

1. If the data in statement I alone is sufficient to answer, while the data in statement II alone is not sufficient to answer the question.
2. If the data in statement II alone is sufficient to answer the question, while the data in statement I is alone is not sufficient to answer the question.
3. If the data either in statement I alone or in statement II alone is sufficient to answer the question.
4. If the data in both statement I and II together are necessary to answer the question.

Options :

- 485584146909. 1
- 485584146910. 2
- 485584146911. 3
- 485584146912. 4

Question Number : 93 Question Id : 48558436728 Question Type : MCQ Option Shuffling : No Is Question Mandatory : No Calculator : None Response Time : N.A Think Time : N.A Minimum Instruction Time : 0

Correct Marks : 5 Wrong Marks : 1

Question Key Details :

Key	Value
Comprehension	MCQ

A, B, C, D तथा E में सबसे छोटा कौन है:

कथन 1. D, E से छोटा है किन्तु C से लंबा है।

कथन 2. B, A जितना लंबा नहीं है किंतु E से लंबा है।

उत्तर दें :

1. यदि केवल कथन I में दी गई सूचना ही उत्तर के लिए पर्याप्त है जबकि कथन II में दी गई सूचना प्रश्न का उत्तर देने के लिए पर्याप्त नहीं है।
2. कथन II में दी गई सूचना ही प्रश्न का उत्तर देने के लिए पर्याप्त है जबकि कथन I में दी गई सूचना ही प्रश्न का उत्तर देने के लिए पर्याप्त नहीं है।
3. अकेले कथन I अथवा अकेले कथन II में दी गई सूचना प्रश्न का उत्तर देने के लिए पर्याप्त है।
4. दोनों कथनों I तथा II में दी गई सूचनाएँ मिलाकर प्रश्न का उत्तर देने के लिए आवश्यक हैं।

Options :

- 485584146909. 1
- 485584146910. 2
- 485584146911. 3

485584146912. 4

Question Number : 93 Question Id : 48558436728 Question Type : MCQ Option Shuffling : No Is Question Mandatory : No Calculator : None Response Time : N.A Think Time : N.A Minimum Instruction Time : 0

Correct Marks : 5 Wrong Marks : 1

Question Key Details :

Key	Value
Comprehension	MCQ

A, B, C, D আৰু E ৰ মাজত আটাইতকৈ চাপৰ কোন ?

- I. D, E-তকৈ চাপৰ, কিন্তু C-তকৈ ওখ
II. B, A-ৰ সমান ওখ নহয় কিন্তু E-তকৈ ওখ

উত্তৰটো হ'বঃ

- উক্তি I-ত দিয়া তথ্য খিনি উত্তৰ দিবলৈ অকলেই যথেষ্ট, কিন্তু উক্তি II-ৰ তথ্যখিনি উত্তৰ দিবলৈ অকলে যথেষ্ট নহয়।
- উক্তি II-ত দিয়া তথ্য উত্তৰ দিবলৈ অকলেই যথেষ্ট, কিন্তু উক্তি I-ৰ তথ্যখিনি উত্তৰ দিবলৈ অকলে যথেষ্ট নহয়।
- উক্তি I বা উক্তি II-ৰ যিকোনো এটাৰ তথ্যই অকলে প্ৰশ্নটোৰ উত্তৰ দিবলৈ যথেষ্ট।
- প্ৰশ্নটোৰ উত্তৰ দিবলৈ উক্তি I আৰু উক্তি II দুয়োটাৰে সন্মিলিত তথ্যৰাজি প্ৰয়োজনীয়।

Options :

485584146909. 1
485584146910. 2
485584146911. 3
485584146912. 4

Question Number : 93 Question Id : 48558436728 Question Type : MCQ Option Shuffling : No Is Question Mandatory : No Calculator : None Response Time : N.A Think Time : N.A Minimum Instruction Time : 0

Correct Marks : 5 Wrong Marks : 1

Question Key Details :

Key	Value
Comprehension	MCQ

A, B, C, D એવં E ર મધ્યે કે સંક્ષિપ્તતમ ?

- I. D હલ E એર થેકે ઢ્છોટ કિલ્લુ C એર થેકે લઘ્વા
- II. B હલ A એર થેકે લઘ્વા નય કિલ્લુ E એર થેકે લઘ્વા

Give answer :

1. યદિ શુધુમાત્ર વિવૃતિ I એર ડેટા ઉત્તર દેઁયાર જન્ય યથેષ્ઠ હય યઘન વિવૃતિ II એર ડેટા પ્રશ્નેર ઉત્તર દેઁયાર જન્ય યથેષ્ઠ નય।
2. યદિ શુધુમાત્ર વિવૃતિ II એર ડેટા ઉત્તર દેઁયાર જન્ય યથેષ્ઠ યઘન વિવૃતિ I એર ડેટા પ્રશ્નેર ઉત્તર દેઁયાર જન્ય યથેષ્ઠ નય।
3. યદિ વિવૃતિ I અથવા વિવૃતિ II-યે થાકા યેકોનો ડેટા એકકભાવે પ્રશ્નેર ઉત્તર દેઁયાર જન્ય યથેષ્ઠ
4. યદિ વિવૃતિ I એવં વિવૃતિ II ઢુટોર ડેટાઈ પ્રશ્નેર ઉત્તર દેઁયાર જન્ય જરૂરિ

Options :

485584146909. 1
485584146910. 2
485584146911. 3
485584146912. 4

Question Number : 93 Question Id : 48558436728 Question Type : MCQ Option Shuffling : No Is Question Mandatory : No Calculator : None Response Time : N.A Think Time : N.A Minimum Instruction Time : 0

Correct Marks : 5 Wrong Marks : 1

Question Key Details :

Key	Value
Comprehension	MCQ

A, B, C, D અને E માંથી સૌથી નાનું / ઠીગણું ?

- I. D એ E કરતા નાની / ઠીગણી છે, પણ C કરતા ઠીયી છે.
- II. B એ A જેટલી ઠીયી નથી પણ E કરતા ઠીયી છે.

જવાબ આપી :

1. જો નિવેદન I માંનો ડેટા એકલા જવાબ આપવા માટે પૂરતી છે, જ્યારે નિવેદન II માંનો ડેટા એકલા પ્રશ્નો જવાબ આપવા માટે પૂરતી નથી.
2. જો નિવેદન II માંનો ડેટા એકલા જવાબ આપવા માટે પૂરતી છે, જ્યારે નિવેદન I માંનો ડેટા એકલા પ્રશ્નોની જવાબ આપવા માટે પૂરતી નથી.
3. જો એકલા નિવેદન I માં અથવા નિવેદન II માં ડેટા પ્રશ્નોની જવાબ આપવા માટે પૂરતી છે.
4. જો પ્રશ્નોની જવાબ આપવા માટે નિવેદન I અને નિવેદન II બંનેમાંનો ડેટા એક સાથે જરૂરી હીય.

Options :

485584146909. 1
485584146910. 2

485584146911. 3

485584146912. 4

Question Number : 93 Question Id : 48558436728 Question Type : MCQ Option Shuffling : No Is Question Mandatory : No Calculator : None Response Time : N.A Think Time : N.A Minimum Instruction Time : 0

Correct Marks : 5 Wrong Marks : 1

Question Key Details :

Key	Value
Comprehension	MCQ

A, B, C, D ಮತ್ತು E ನಡುವೆ ಯಾರು ಅತಿ ಗಿಡ್ಡವಾಗಿದ್ದಾರೆ?

- I. D ಯು E ಗಿಂತ ಗಿಡ್ಡವಾಗಿದ್ದಾನೆ, ಆದರೆ, C ಗಿಂತ ಉದ್ದವಾಗಿದ್ದಾನೆ.
- II. B ಯು A ಯಷ್ಟು ಉದ್ದವಾಗಿಲ್ಲ ಆದರೆ E ಗಿಂತ ಉದ್ದವಾಗಿದ್ದಾನೆ.

ಉತ್ತರವನ್ನು ನೀಡಿ:

1. ಹೇಳಿಕೆ I ರಲ್ಲಿರುವ ದತ್ತಾಂಶದೊಂದಿಗೆ ಉತ್ತರಿಸಲು ಸಾಕಾಗುವುದಾದರೆ, ಹೇಳಿಕೆ II ರಲ್ಲಿರುವ ದತ್ತಾಂಶವೊಂದೇ ಪ್ರಶ್ನೆಗೆ ಉತ್ತರಿಸಲು ಸಾಕಾಗುವುದಿಲ್ಲ.
2. ಹೇಳಿಕೆ II ರಲ್ಲಿರುವ ದತ್ತಾಂಶವೊಂದೇ ಪ್ರಶ್ನೆಗೆ ಉತ್ತರಿಸಲು ಸಾಕಾಗುವುದಾದರೆ, ಹೇಳಿಕೆ I ರಲ್ಲಿರುವ ದತ್ತಾಂಶವೊಂದೇ ಪ್ರಶ್ನೆಗೆ ಉತ್ತರಿಸಲು ಸಾಕಾಗುವುದಿಲ್ಲ.
3. ಹೇಳಿಕೆ I ಒಂದೇ ಅಥವಾ ಹೇಳಿಕೆ II ಒಂದೇ ಪ್ರಶ್ನೆಗೆ ಉತ್ತರಿಸಲು ಸಾಕಾಗುವುದು.
4. ಹೇಳಿಕೆ I ಮತ್ತು II ರಲ್ಲಿರುವ ದತ್ತಾಂಶವು ಅವಶ್ಯವಾಗಿ ಪ್ರಶ್ನೆಗೆ ಉತ್ತರಿಸಲು ಸಾಕಾಗುತ್ತದೆ.

Options :

485584146909. 1

485584146910. 2

485584146911. 3

485584146912. 4

Question Number : 93 Question Id : 48558436728 Question Type : MCQ Option Shuffling : No Is Question Mandatory : No Calculator : None Response Time : N.A Think Time : N.A Minimum Instruction Time : 0

Correct Marks : 5 Wrong Marks : 1

Question Key Details :

Key	Value
Comprehension	MCQ

A, B, C, D & E ഇവരിൽ ഏറ്റവും ഉയരം കുറഞ്ഞത് ആർക്കാണ് ?

- I. D, E യേക്കാൾ ചെറുതും C യേക്കാൾ വലുതുംമാണ് .
II. B, A യുടെ അത്ര വലുതല്ല പക്ഷേ E യേക്കാൾ വലുതുംമാണ് .

ഉത്തരം ഏത് :

1. പ്രസ്താവന 1 മാത്രം ഉത്തരം നൽകാൻ പര്യാപ്തമാണ് എന്നാൽ പ്രസ്താവന 2 ന് മാത്രം ഉത്തരം നൽകാൻ കഴിയില്ല
2. പ്രസ്താവന 2 മാത്രം ഉത്തരം നൽകാൻ പര്യാപ്തമാണ്. പ്രസ്താവന 1 ന് മാത്രം ഉത്തരം നൽകാൻ കഴിയില്ല
3. പ്രസ്താവന 1 ഓ, പ്രസ്താവന 2 ഓ ഉപയോഗിച്ച് ഉത്തരം കണ്ടെത്താം
4. പ്രസ്താവന 1ഉം പ്രസ്താവന 2ഉം ഒരുമിച്ച് ഉപയോഗിച്ചാലെ ഉത്തരം ലഭിക്കും

Options :

485584146909. 1
485584146910. 2
485584146911. 3
485584146912. 4

Question Number : 93 Question Id : 48558436728 Question Type : MCQ Option Shuffling : No Is Question Mandatory : No Calculator : None Response Time : N.A Think Time : N.A Minimum Instruction Time : 0

Correct Marks : 5 Wrong Marks : 1

Question Key Details :

Key	Value
Comprehension	MCQ

A, B, C, D आणि E यांच्यामध्ये कोण लहान आहे?

- I. D हा E पेक्षा लहान आहे, परंतु C पेक्षा उंच आहे.
II. B हा A सारखा उंच नाही, परंतु E पेक्षा उंच आहे.

उत्तर द्या :

1. एकट्या विधान I मधील माहिती ही उत्तर देण्यास पुरेशी आहे, तर एकट्या विधान II मधील माहिती ही प्रश्नाचे उत्तर देण्यास पुरेशी नाही.
2. एकट्या विधान II मधील माहिती ही प्रश्नाचे उत्तर देण्यास पुरेशी आहे, तर एकट्या विधान I मधील माहिती ही प्रश्नाचे उत्तर देण्यास पुरेशी नाही.
3. एकट्या विधान I मधील माहिती किंवा एकट्या विधान II मधील माहिती प्रश्नाचे उत्तर देण्यास पुरेशी आहे.
4. दोन्ही विधान I व विधान II मधील माहिती ही प्रश्नाचे उत्तर देण्यास आवश्यक आहे.

Options :

485584146909. 1
485584146910. 2

485584146911. 3

485584146912. 4

Question Number : 93 Question Id : 48558436728 Question Type : MCQ Option Shuffling : No Is Question Mandatory : No Calculator : None Response Time : N.A Think Time : N.A Minimum Instruction Time : 0

Correct Marks : 5 Wrong Marks : 1

Question Key Details :

Key	Value
Comprehension	MCQ

A, B, C, D ଏବଂ E କ ମଧ୍ୟରୁ କିଏ ସବୁଠୁ ଗେଡ଼ା?

I. D, E ଠାରୁ ଗେଡ଼ା, କିନ୍ତୁ C ଠାରୁ ଲମ୍ବା

II. B, A ଭଳିଆ ଲମ୍ବା କିନ୍ତୁ E ଠାରୁ ଲମ୍ବା

ଉତ୍ତର ଦିଅନ୍ତୁ :

- ଯଦି କେବଳ କଥନ I ରେ ଦିଆଯାଇଥିବା ତାତ୍ତ୍ୱ (data) ପ୍ରଶ୍ନର ଉତ୍ତର ଦେବା ପାଇଁ ଯଥେଷ୍ଟ ହେଲେ କେବଳ କଥନ II ରେ ଦିଆଯାଇଥିବା ତାତ୍ତ୍ୱ ପ୍ରଶ୍ନର ଉତ୍ତର ଦେବା ପାଇଁ ଯଥେଷ୍ଟ ନୁହେଁ
- ଯଦି କେବଳ କଥନ II ରେ ଦିଆଯାଇଥିବା ତାତ୍ତ୍ୱ ପ୍ରଶ୍ନର ଉତ୍ତର ଦେବା ପାଇଁ ଯଥେଷ୍ଟ ହେଲେ କେବଳ କଥନ I ରେ ଦିଆଯାଇଥିବା ତାତ୍ତ୍ୱ ପ୍ରଶ୍ନର ଉତ୍ତର ଦେବା ପାଇଁ ଯଥେଷ୍ଟ ନୁହେଁ
- କଥନ I କିମ୍ବା କଥନ II ରେ ଦିଆଯାଇଥିବା ତାତ୍ତ୍ୱ କେବଳ ପ୍ରଶ୍ନର ଉତ୍ତର ଦେବା ପାଇଁ ଯଥେଷ୍ଟ
- କଥନ I ଏବଂ କଥନ II ରେ ଦିଆଯାଇଥିବା ତାତ୍ତ୍ୱ, ପ୍ରଶ୍ନର ଉତ୍ତର ଦେବା ପାଇଁ ଉଭୟଙ୍କ ଆବଶ୍ୟକତା ରହିଛି

Options :

485584146909. 1

485584146910. 2

485584146911. 3

485584146912. 4

Question Number : 93 Question Id : 48558436728 Question Type : MCQ Option Shuffling : No Is Question Mandatory : No Calculator : None Response Time : N.A Think Time : N.A Minimum Instruction Time : 0

Correct Marks : 5 Wrong Marks : 1

Question Key Details :

Key	Value
Comprehension	MCQ

A, B, C, D ਅਤੇ E ਵਿੱਚੋਂ ਕੌਣ ਸਭ ਤੋਂ ਛੋਟਾ ਹੈ?

- I. D E ਤੋਂ ਛੋਟਾ ਹੈ ਪਰ C ਤੋਂ ਲੰਬਾ ਹੈ।
- II. B A ਜਿੰਨਾ ਲੰਬਾ ਨਹੀਂ ਹੈ ਪਰ E ਨਾਲੋਂ ਉੱਚਾ ਹੈ।

ਉੱਤਰ ਦਿਉ:

1. ਜੇਕਰ **ਕਥਨ I** ਵਿਚਲਾ ਡਾਟਾ ਇੱਕਲਾ ਜਵਾਬ ਦੇਣ ਲਈ ਕਾਫੀ ਹੈ, ਜਦੋਂ ਕਿ **ਕਥਨ II** ਵਿਚਲਾ ਡਾਟਾ ਇੱਕਲਾ ਹੀ ਸਵਾਲ ਦਾ ਜਵਾਬ ਦੇਣ ਲਈ ਕਾਫੀ ਨਹੀਂ ਹੈ।
2. ਜੇਕਰ **ਕਥਨ II** ਵਿਚਲਾ ਡਾਟਾ ਇੱਕਲਾ ਜਵਾਬ ਦੇਣ ਲਈ ਕਾਫੀ ਹੈ, ਜਦੋਂ ਕਿ **ਕਥਨ I** ਵਿਚਲਾ ਡਾਟਾ ਇੱਕਲਾ ਹੀ ਸਵਾਲ ਦਾ ਜਵਾਬ ਦੇਣ ਲਈ ਕਾਫੀ ਨਹੀਂ ਹੈ।
3. ਜੇਕਰ **ਕਥਨ I** ਦਾ ਡਾਟਾ ਬਿਲਕੁਲ ਇੱਕਲਾ ਅਤੇ **ਕਥਨ II** ਇੱਕਲਾ ਪ੍ਰਸ਼ਨ ਦਾ ਉੱਤਰ ਦੇਣ ਲਈ ਕਾਫੀ ਹੈ।
4. ਅਗਰ ਦੋਵੇਂ **ਕਥਨ I** ਅਤੇ **ਕਥਨ II** ਦਾ ਡਾਟਾ ਇੱਕਠੇ ਹੀ ਪ੍ਰਸ਼ਨ ਦਾ ਉੱਤਰ ਦੇਣ ਲਈ ਜਰੂਰੀ ਹਨ।

Options :

485584146909. 1
485584146910. 2
485584146911. 3
485584146912. 4

Question Number : 93 Question Id : 48558436728 Question Type : MCQ Option Shuffling : No Is Question Mandatory : No Calculator : None Response Time : N.A Think Time : N.A Minimum Instruction Time : 0

Correct Marks : 5 Wrong Marks : 1

Question Key Details :

Key	Value
Comprehension	MCQ

A, B, C, D ਮਹੱਤਵਪੂਰਨ E ਵਿਚਲਾ ਡਾਟਾ ਇੱਕਲਾ ਜਵਾਬ ਦੇਣ ਲਈ ਕਾਫੀ ਹੈ ?

- I. D ਜੇਕਰ E ਜਿੰਨਾ ਲੰਬਾ ਨਹੀਂ ਹੈ ਪਰ C ਜਿੰਨਾ ਲੰਬਾ ਹੈ।
- II. B ਜੇਕਰ A ਜਿੰਨਾ ਲੰਬਾ ਨਹੀਂ ਹੈ ਪਰ E ਨਾਲੋਂ ਉੱਚਾ ਹੈ।

ਕੋਈ ਵੀ ਗੱਲ ਦਾ ਵਾਕਿਆ ਵਿਚਲਾ ਡਾਟਾ ਇੱਕਲਾ ਜਵਾਬ ਦੇਣ ਲਈ ਕਾਫੀ ਹੈ:

1. ਪਤਲੀ ਗੱਲ ਦਾ ਵਾਕਿਆ I ਵਿਚਲਾ ਡਾਟਾ ਇੱਕਲਾ ਜਵਾਬ ਦੇਣ ਲਈ ਕਾਫੀ ਹੈ, ਪਰ II ਵਿਚਲਾ ਡਾਟਾ ਇੱਕਲਾ ਜਵਾਬ ਦੇਣ ਲਈ ਕਾਫੀ ਨਹੀਂ ਹੈ।
2. ਪਤਲੀ ਗੱਲ ਦਾ ਵਾਕਿਆ II ਵਿਚਲਾ ਡਾਟਾ ਇੱਕਲਾ ਜਵਾਬ ਦੇਣ ਲਈ ਕਾਫੀ ਹੈ, ਪਰ I ਵਿਚਲਾ ਡਾਟਾ ਇੱਕਲਾ ਜਵਾਬ ਦੇਣ ਲਈ ਕਾਫੀ ਨਹੀਂ ਹੈ।
3. ਪਤਲੀ ਗੱਲ ਦਾ ਵਾਕਿਆ I ਵਿਚਲਾ ਡਾਟਾ ਇੱਕਲਾ ਜਵਾਬ ਦੇਣ ਲਈ ਕਾਫੀ ਹੈ, ਪਰ II ਵਿਚਲਾ ਡਾਟਾ ਇੱਕਲਾ ਜਵਾਬ ਦੇਣ ਲਈ ਕਾਫੀ ਨਹੀਂ ਹੈ।
4. ਪਤਲੀ ਗੱਲ ਦਾ ਵਾਕਿਆ I ਮਹੱਤਵਪੂਰਨ II ਵਿਚਲਾ ਡਾਟਾ ਇੱਕਲਾ ਜਵਾਬ ਦੇਣ ਲਈ ਕਾਫੀ ਹੈ।

Options :

485584146909. 1
485584146910. 2
485584146911. 3
485584146912. 4

Question Number : 93 Question Id : 48558436728 Question Type : MCQ Option Shuffling : No Is Question Mandatory : No Calculator : None Response Time : N.A Think Time : N.A Minimum Instruction Time : 0

Correct Marks : 5 Wrong Marks : 1

Question Key Details :

Key	Value
Comprehension	MCQ

A, B, C, D మరియు E లో ఎవరు పొట్టి ?

- I. D, E కన్నా పొట్టి, కాని C కన్నా పొడవు.
II. B, A అంత పొడవు కాదు, కాని E కన్నా పొడవు

సరైన సమాధానం ఇవ్వండి:

1. ప్రకటన I మాత్రమే జవాబు ఇవ్వడానికి సరిపోతుంది, అయితే ప్రకటన II లోని డాటా మాత్రమే ప్రశ్నకు జవాబు ఇవ్వడానికి సరిపోదు
2. ప్రకటన- II మాత్రమే జవాబు ఇవ్వడానికి సరిపోతుంది, అయితే ప్రకటన-I లోని డాటా మాత్రమే ప్రశ్నకు జవాబు ఇవ్వడానికి సరిపోదు
3. ప్రకటన-I లోని డాటా మాత్రమే లేదా ప్రకటన-II లోని డాటా మాత్రమే జవాబు ఇవ్వడానికి సరిపోతుంది
4. ప్రకటన-I మరియు II కలిపి ప్రశ్నకు జవాబు ఇవ్వడానికి అవసరం

Options :

485584146909. 1
485584146910. 2
485584146911. 3
485584146912. 4

Question Number : 93 Question Id : 48558436728 Question Type : MCQ Option Shuffling : No Is Question Mandatory : No Calculator : None Response Time : N.A Think Time : N.A Minimum Instruction Time : 0

Correct Marks : 5 Wrong Marks : 1

Question Key Details :

Key	Value
Comprehension	MCQ

A, B, C, D اور E میں سب سے چھوٹا کون ہے ؟

I. D چھوٹا (پست قامت) ہے 'E' سے لیکن 'C' سے لمبا ہے
II. 'B' اتنا لمبا نہیں جتنا کہ 'A' ہے لیکن وہ 'E' سے لمبا ہے

جواب دیں :

1. صرف بیان '1' کافی ہے جواب کیلئے جبکہ بیان '11' اکیلے ناکافی ہے جواب کیلئے
2. صرف بیان '11' کافی ہے جواب کیلئے جبکہ بیان '1' اکیلے ناکافی ہے جواب کیلئے
3. صرف بیان '1' یا صرف بیان '11' سے جواب ممکن ہے
4. دونوں بیانیوں (1,11) کی ضرورت ہے جواب کیلئے

Options :

485584146909. 1
485584146910. 2
485584146911. 3
485584146912. 4

Question Number : 94 Question Id : 48558436729 Question Type : MCQ Option Shuffling : No Is Question Mandatory : No Calculator : None Response Time : N.A Think Time : N.A Minimum Instruction Time : 0

Correct Marks : 5 Wrong Marks : 1

Question Key Details :

Key	Value
Comprehension	MCQ

Assertion (A) : An apple a day Keeps the doctor away.

Reason (R) : Apple are very Costly.

1. If 'A' is true but 'R' is false
2. If 'A' is false but 'R' is true
3. If both 'A' and 'R' are false
4. If both 'A' and 'R' are true but 'R' is not the correct explanation of 'A'

Options :

485584146913. 1
485584146914. 2
485584146915. 3
485584146916. 4

Question Number : 94 Question Id : 48558436729 Question Type : MCQ Option Shuffling : No Is Question Mandatory : No Calculator : None Response Time : N.A Think Time : N.A Minimum Instruction Time : 0

Correct Marks : 5 Wrong Marks : 1

Question Key Details :

Key	Value
Comprehension	MCQ

अभिकथन (A) : दिन में एक सेब खाने से स्वास्थ्य ठीक रहता है।

कारण (R) : सेब बहुत मँहगे हैं।

1. 'A' सत्य है परन्तु 'R' असत्य है
2. 'A' असत्य है परन्तु 'R' सत्य है
3. दोनों 'A' तथा 'R' असत्य है
4. दोनों 'A' तथा 'R' सत्य है परन्तु 'R', 'A' की सही व्याख्या नहीं है

Options :

485584146913. 1
485584146914. 2
485584146915. 3
485584146916. 4

Question Number : 94 Question Id : 48558436729 Question Type : MCQ Option Shuffling : No Is Question Mandatory : No Calculator : None Response Time : N.A Think Time : N.A Minimum Instruction Time : 0

Correct Marks : 5 Wrong Marks : 1

Question Key Details :

Key	Value
Comprehension	MCQ

উক্তি (A) : প্রতিদিনে এটা আপেল খালে ডাক্তারক দূৰত বাখিব পৰা যায়।

যুক্তি (R) : আপেলৰ মূল্য অতি বেছি।

1. 'A' শুদ্ধ কিন্তু 'R' ভুল
2. 'A' ভুল কিন্তু 'R' শুদ্ধ
3. 'A' আৰু 'R' দুয়োটাই ভুল
4. 'A' আৰু 'R' দুয়োটাই শুদ্ধ, কিন্তু 'R', 'A' ৰ শুদ্ধ ব্যাখ্যা নহয়

Options :

485584146913. 1
485584146914. 2
485584146915. 3
485584146916. 4

Question Number : 94 Question Id : 48558436729 Question Type : MCQ Option Shuffling : No Is Question Mandatory : No Calculator : None Response Time : N.A Think Time : N.A Minimum Instruction Time : 0

Correct Marks : 5 Wrong Marks : 1

Question Key Details :

Key	Value
Comprehension	MCQ

અનુમાન A : પ્રતિદિન એકા આપેલ ખાઉ ડાક્તર થેકે દૂરે થાકો

કારણ R : આપેલ ખુવ દામી ફલ

1. યદિ 'A' સત્ય કિન્તુ 'R' મિથ્યા
2. યદિ 'A' મિથ્યા કિન્તુ 'R' સત્ય
3. યદિ ઉભય 'A' એવં 'R' મિથ્યા
4. યદિ ઉભય 'A' એવં 'R' સત્ય કિન્તુ 'R' હલ 'A' એર વર્ણનાય સત્ય નય।

Options :

485584146913. 1

485584146914. 2

485584146915. 3

485584146916. 4

Question Number : 94 Question Id : 48558436729 Question Type : MCQ Option Shuffling : No Is Question Mandatory : No Calculator : None Response Time : N.A Think Time : N.A Minimum Instruction Time : 0

Correct Marks : 5 Wrong Marks : 1

Question Key Details :

Key	Value
Comprehension	MCQ

કથન A : દિવસનું એક સફરજન ડોક્ટરને દુર રાખે છે.

કારણ R : સફરજન ખૂબ મોઘા છે.

1. જો 'A' સાચું છે તો 'R' ખોટું છે.
2. જો 'A' ખોટું છે તો 'R' સાચું છે.
3. જો 'A' અને 'R' બંને ખોટા છે.
4. બંને 'A' અને 'R' સાચા છે તો 'R' એ 'A' ની સારી સમજૂતી નથી.

Options :

485584146913. 1

485584146914. 2

485584146915. 3

485584146916. 4

Question Number : 94 Question Id : 48558436729 Question Type : MCQ Option Shuffling : No Is Question Mandatory : No Calculator : None Response Time : N.A Think Time : N.A Minimum Instruction Time : 0

Correct Marks : 5 Wrong Marks : 1

Question Key Details :

Key	Value
Comprehension	MCQ

ಪ್ರತಿಪಾದನೆ A: ದಿನಕ್ಕೊಂದು ಸೇಬು ಪೈದ್ಯರನ್ನು ದೂರವಿರಿಸುತ್ತದೆ.

ಕಾರಣ R: ಸೇಬು ತುಂಬಾ ದುಬಾರಿ.

1. 'A' ಸತ್ಯವಾದರೆ 'R' ತಪ್ಪಾಗಿದೆ
2. 'A' ತಪ್ಪಾದರೆ 'R' ಸತ್ಯವಾಗಿದೆ
3. 'A' ಮತ್ತು 'R' ಗಳೆರಡೂ ತಪ್ಪಾಗಿವೆ
4. 'A' ಮತ್ತು 'R' ಗಳೆರಡೂ ಸತ್ಯವಾಗಿವೆ. ಆದರೆ, 'R' ಯು 'A' ಯ ಸರಿಯಾದ ವಿವರಣೆಯಲ್ಲ.

Options :

485584146913. 1
485584146914. 2
485584146915. 3
485584146916. 4

Question Number : 94 Question Id : 48558436729 Question Type : MCQ Option Shuffling : No Is Question Mandatory : No Calculator : None Response Time : N.A Think Time : N.A Minimum Instruction Time : 0

Correct Marks : 5 Wrong Marks : 1

Question Key Details :

Key	Value
Comprehension	MCQ

അവകാശവാദം A : ദിവസവും ഒരു ആപ്പിൾ കഴിക്കുന്നത് വഴി ഡോക്ടറെ ഒഴിവാക്കി ജീവിക്കാൻ കഴിയും

കാരണം R: ആപ്പിൾ ചിലവേറിയതാണ്

1. A ശരിയും R തെറ്റുമാണ്
2. A തെറ്റും R ശരിയുമാണ്
3. A യും R ഉം തെറ്റാണ്
4. A യും R ഉം ശരിയാണ് പക്ഷേ "R" "A" യ്ക്കുള്ള ശരിയായ വിശദീകരണമല്ല

Options :

485584146913. 1
485584146914. 2
485584146915. 3
485584146916. 4

Question Number : 94 Question Id : 48558436729 Question Type : MCQ Option Shuffling : No Is Question Mandatory : No Calculator : None Response Time : N.A Think Time : N.A Minimum Instruction Time : 0

Correct Marks : 5 Wrong Marks : 1

Question Key Details :

Key	Value
Comprehension	MCQ

विधान A : रोज एक सफरचंद खा आणि डॉक्टरपासून दूर रहा.

कारण R : सफरचंद खूप महाग असतात.

1. 'A' हे बरोबर, परंतु 'R' हे चूक
2. 'A' हे चूक, परंतु 'R' हे बरोबर
3. 'A' आणि 'R' दोन्ही ही चूक
4. 'A' आणि 'R' हे बरोबर आहेत, परंतु 'R' हे 'A' चे योग्य स्पष्टीकरण नाही.

Options :

485584146913. 1
485584146914. 2
485584146915. 3
485584146916. 4

Question Number : 94 Question Id : 48558436729 Question Type : MCQ Option Shuffling : No Is Question Mandatory : No Calculator : None Response Time : N.A Think Time : N.A Minimum Instruction Time : 0

Correct Marks : 5 Wrong Marks : 1

Question Key Details :

Key	Value
Comprehension	MCQ

वृत्तान्त A : प्रतिदिन गोलिख करी थापेल्ले खाऊलेले फाळुरेकू घुंरेलेले सुवा।

कारण R : थापेल्ले वसूत फाळुरे।

1. यदि 'A' सत्य असेल किंवा 'R' निथ्या असेल
2. यदि 'A' निथ्या असेल किंवा 'R' सत्य असेल
3. यदि 'A' वरुं 'R' उल्लेख निथ्या
4. यदि उल्लेख 'A' वरुं 'R' सत्य असेल किंवा 'R', 'A'ले सल्ले अर्थ वृत्तान्त करेले नाहूँ

Options :

485584146913. 1
485584146914. 2
485584146915. 3
485584146916. 4

Question Number : 94 Question Id : 48558436729 Question Type : MCQ Option Shuffling : No Is Question Mandatory : No Calculator : None Response Time : N.A Think Time : N.A Minimum Instruction Time : 0

Correct Marks : 5 Wrong Marks : 1

Question Key Details :

Key	Value
Comprehension	MCQ

ਦਾਅਵਾ A : ਰੋਜ਼ਾਨਾ ਇੱਕ ਸੇਬ ਡਾਕਟਰ ਨੂੰ ਦੂਰ ਰੱਖ ਸਕਦਾ ਹੈ।

ਕਾਰਣ R : ਸੇਬ ਬੜੇ ਮਹਿੰਗੇ ਹਨ।

1. ਅਗਰ 'A' ਸਹੀ ਹੈ ਪਰ 'R' ਗਲਤ ਹੈ।
2. ਅਗਰ 'A' ਗਲਤ ਪਰ 'R' ਸਹੀ ਹੈ।
3. ਅਗਰ ਦੋਵੇਂ 'A' ਅਤੇ 'R' ਗਲਤ ਹਨ।
4. ਅਗਰ ਦੋਵੇਂ 'A' ਅਤੇ 'R' ਸਹੀ ਪਰ 'R' 'A' ਦੀ ਸਹੀ ਵਿਆਖਿਆ ਨਹੀਂ ਹੈ।

Options :

485584146913. 1
485584146914. 2
485584146915. 3
485584146916. 4

Question Number : 94 Question Id : 48558436729 Question Type : MCQ Option Shuffling : No Is Question Mandatory : No Calculator : None Response Time : N.A Think Time : N.A Minimum Instruction Time : 0

Correct Marks : 5 Wrong Marks : 1

Question Key Details :

Key	Value
Comprehension	MCQ

உறுதிக்கூற்று A : நாளொன்றுக்கு ஒரு ஆப்பிள் சாப்பிட்டால் மருத்துவரிடம் செல்லத் தேவையில்லை.

காரணம் R : ஆப்பிள் விலை உயர்ந்தது.

1. 'A' சரி ஆனால் 'R' தவறு
2. 'A' தவறு ஆனால் 'R' சரி
3. 'A' மற்றும் 'R' ஆகிய இரண்டும் தவறு
4. 'A' மற்றும் 'R' ஆகிய இரண்டும் சரி ஆனால் 'R' என்பது 'A' இன் சரியான விளக்கமல்ல

Options :

485584146913. 1
485584146914. 2
485584146915. 3
485584146916. 4

Question Number : 94 Question Id : 48558436729 Question Type : MCQ Option Shuffling : No Is Question Mandatory : No Calculator : None Response Time : N.A Think Time : N.A Minimum Instruction Time : 0

Correct Marks : 5 Wrong Marks : 1

Question Key Details :

Key	Value
Comprehension	MCQ

ధృవీకరణ A : రోజుకు ఒక ఆపిల్ వైద్యుడిని దూరంగా ఉంచుతుంది

కారణం R : ఆపిల్ చాలా ఖర్చుతో కూడుకున్నది

1. 'A' నిజం కాని 'R' అబద్ధం
2. 'A' అబద్ధం కాని 'R' నిజం
3. 'A' మరియు 'R' రెండూ అబద్ధం
4. 'A' మరియు 'R' రెండు నిజం కాని 'A' కు సరైన వివరణ 'R' కాదు.

Options :

485584146913. 1
485584146914. 2
485584146915. 3
485584146916. 4

Question Number : 94 Question Id : 48558436729 Question Type : MCQ Option Shuffling : No Is Question Mandatory : No Calculator : None Response Time : N.A Think Time : N.A Minimum Instruction Time : 0

Correct Marks : 5 Wrong Marks : 1

Question Key Details :

Key	Value
Comprehension	MCQ

بیان 'A' : ایک دن میں ایک سیب ڈاکٹر سے دور رکھتا ہے

بیان 'R' : سیب بہت مہنگے ہیں

1. صحیح ہے لیکن R غلط ہے
2. A غلط ہے لیکن R صحیح ہے
3. دونوں A اور R غلط ہیں
4. دونوں A اور R درست ہیں لیکن R صحیح وضاحت نہیں ہے A کی

Options :

485584146913. 1
485584146914. 2
485584146915. 3
485584146916. 4

Question Number : 95 Question Id : 48558436730 Question Type : MCQ Option Shuffling : No Is Question Mandatory : No Calculator : None Response Time : N.A Think Time : N.A Minimum Instruction Time : 0

Correct Marks : 5 Wrong Marks : 1

Question Key Details :

Key	Value
Comprehension	MCQ

If LEGACY in a certain language is coded OVTZXB, then how will the word GRASP written in that language :

1. TIZHK
2. OXZNL
3. HJYGL
4. SJYIL

Options :

485584146917. 1
485584146918. 2
485584146919. 3
485584146920. 4

Question Number : 95 Question Id : 48558436730 Question Type : MCQ Option Shuffling : No Is Question Mandatory : No Calculator : None Response Time : N.A Think Time : N.A Minimum Instruction Time : 0

Correct Marks : 5 Wrong Marks : 1

Question Key Details :

Key	Value
Comprehension	MCQ

यदि LEGACY को एक विशेष भाषा में OVTZXB लिखा जाता है, तो GRASP शब्द को उस भाषा में किस प्रकार लिखा जाएगा:

1. TIZHK
2. OXZNL
3. HJYGL
4. SJYIL

Options :

485584146917. 1
485584146918. 2
485584146919. 3
485584146920. 4

Question Number : 95 Question Id : 48558436730 Question Type : MCQ Option Shuffling : No Is Question Mandatory : No Calculator : None Response Time : N.A Think Time : N.A Minimum Instruction Time : 0

Correct Marks : 5 Wrong Marks : 1

Question Key Details :

Key	Value
Comprehension	MCQ

যদি কোনো এক সাংকেতিক ভাষাত LEGACY ক OVTZXB হিচাপে লিখা হৈছে, তেন্তে একে সাংকেতিক ভাষাত GRASP শব্দটোক কিদৰে লিখা হ'ব?

1. TIZHK
2. OXZNL
3. HJYGL
4. SJYIL

Options :

485584146917. 1
485584146918. 2
485584146919. 3
485584146920. 4

Question Number : 95 Question Id : 48558436730 Question Type : MCQ Option Shuffling : No Is Question Mandatory : No Calculator : None Response Time : N.A Think Time : N.A Minimum Instruction Time : 0

Correct Marks : 5 Wrong Marks : 1

Question Key Details :

Key	Value
Comprehension	MCQ

যদি LEGACY একটি কেন্দ্ৰ ভাষা কোড OVTZXB হয়, তাহলে GRASP শব্দটি লেখাৰ ভাষা হ'বে :

1. TIZHK
2. OXZNL
3. HJYGL
4. SJYIL

Options :

485584146917. 1
485584146918. 2
485584146919. 3
485584146920. 4

Question Number : 95 Question Id : 48558436730 Question Type : MCQ Option Shuffling : No Is Question Mandatory : No Calculator : None Response Time : N.A Think Time : N.A Minimum Instruction Time : 0

Correct Marks : 5 Wrong Marks : 1

Question Key Details :

Key	Value
Comprehension	MCQ

જો કોઈ ભાષામાં LEGACY ને OVTZXB વખાય છે, તો GRASP ને તે ભાષામાં કેવી રીતે વખાશે ?

1. TIZHK
2. OXZNL
3. HJYGL
4. SJYIL

Options :

485584146917. 1
485584146918. 2
485584146919. 3
485584146920. 4

Question Number : 95 Question Id : 48558436730 Question Type : MCQ Option Shuffling : No Is Question Mandatory : No Calculator : None Response Time : N.A Think Time : N.A Minimum Instruction Time : 0

Correct Marks : 5 Wrong Marks : 1

Question Key Details :

Key	Value
Comprehension	MCQ

LEGACY યન્નુ ક્ષેંદ્ર ભાષેયલ્લિ, OVTZXB ંદુ સંક્ષેત્તિસિદરે, ંગ પદ GRASP ંન્નુ ં ભાષેયલ્લિ, ક્ષેંદ્રે બરેયબકુદુ:

1. TIZHK
2. OXZNL
3. HJYGL
4. SJYIL

Options :

485584146917. 1
485584146918. 2
485584146919. 3
485584146920. 4

Question Number : 95 Question Id : 48558436730 Question Type : MCQ Option Shuffling : No Is Question Mandatory : No Calculator : None Response Time : N.A Think Time : N.A Minimum Instruction Time : 0

Correct Marks : 5 Wrong Marks : 1

Question Key Details :

Key	Value
Comprehension	MCQ

LEGACY = OVTZXB ആണെങ്കിൽ GRASP ന്റെ കോഡ് എന്താണ് ?

1. TIZHK
2. OXZNL
3. HJYGL
4. SJYIL

Options :

485584146917. 1
485584146918. 2
485584146919. 3
485584146920. 4

Question Number : 95 Question Id : 48558436730 Question Type : MCQ Option Shuffling : No Is Question Mandatory : No Calculator : None Response Time : N.A Think Time : N.A Minimum Instruction Time : 0

Correct Marks : 5 Wrong Marks : 1

Question Key Details :

Key	Value
Comprehension	MCQ

जर एका सांकेतिक भाषेत EGACY हा शब्द OVTZXB असा लिहिला, तर त्याच सांकेतिक भाषेत GRASP हा शब्द कसा लिहाल?

1. TIZHK
2. OXZNL
3. HJYGL
4. SJYIL

Options :

485584146917. 1
485584146918. 2
485584146919. 3
485584146920. 4

Question Number : 95 Question Id : 48558436730 Question Type : MCQ Option Shuffling : No Is Question Mandatory : No Calculator : None Response Time : N.A Think Time : N.A Minimum Instruction Time : 0

Correct Marks : 5 Wrong Marks : 1

Question Key Details :

Key	Value
Comprehension	MCQ

ਗੋਰੀ-੧ ਕੇਂਦਰੀ ਭਾਸ਼ਾ (center language) ਯਦੀ 'LEGACY' ਨੂੰ ਗੁਪਤ ਭਾਸ਼ਾ (coded) 'OVTZXB' ਲੇਖਾ ਜਾਵੇ, ਤਾਂ ਹੇਠਲੇ 'GRASP' ਸ਼ਬਦ ਨੂੰ ਕੌਣੀ ਭਾਸ਼ਾ ਵਿੱਚ ਲਿਖਿਆ ਜਾਵੇਗਾ?

1. TIZHK
2. OXZNL
3. HJYGL
4. SJYIL

Options :

485584146917. 1
485584146918. 2
485584146919. 3
485584146920. 4

Question Number : 95 Question Id : 48558436730 Question Type : MCQ Option Shuffling : No Is Question Mandatory : No Calculator : None Response Time : N.A Think Time : N.A Minimum Instruction Time : 0

Correct Marks : 5 Wrong Marks : 1

Question Key Details :

Key	Value
Comprehension	MCQ

ਜੇਕਰ ਕਿਸੇ ਭਾਸ਼ਾ ਵਿੱਚ ਵਿਰਾਸਤ (LEGACY) ਨੂੰ OVTZXB ਕੋਡ ਦਿੱਤਾ ਗਿਆ ਹੈ ਤਾਂ ਉਸ ਭਾਸ਼ਾ ਵਿੱਚ GRASP ਸ਼ਬਦ ਕਿਵੇਂ ਲਿਖਿਆ ਜਾਵੇਗਾ?

1. TIZHK
2. OXZNL
3. HJYGL
4. SJYIL

Options :

485584146917. 1
485584146918. 2
485584146919. 3
485584146920. 4

Question Number : 95 Question Id : 48558436730 Question Type : MCQ Option Shuffling : No Is Question Mandatory : No Calculator : None Response Time : N.A Think Time : N.A Minimum Instruction Time : 0

Correct Marks : 5 Wrong Marks : 1

Question Key Details :

Key	Value
Comprehension	MCQ

'LEGACY' என்பது ஒரு மைய மொழியில் 'OVTZXB' எனக் குறியிடப்பட்டுள்ளது. எனில் 'GRASP' என்ற வார்த்தை அந்த மொழியில் எவ்வாறு எழுதப்பட்டிருக்கும் :

1. TIZHK
2. OXZNL
3. HJYGL
4. SJYIL

Options :

485584146917. 1
485584146918. 2
485584146919. 3
485584146920. 4

Question Number : 95 Question Id : 48558436730 Question Type : MCQ Option Shuffling : No Is Question Mandatory : No Calculator : None Response Time : N.A Think Time : N.A Minimum Instruction Time : 0

Correct Marks : 5 Wrong Marks : 1

Question Key Details :

Key	Value
Comprehension	MCQ

ఒక భాషలో LEGACY అనేది OVTZXB గా కోడ్ చేయబడింది, అయితే GRASP పదం ఆ భాషలో ఎలా వ్రాయబడింది:

1. TIZHK
2. OXZNL
3. HJYGL
4. SJYIL

Options :

485584146917. 1
485584146918. 2
485584146919. 3
485584146920. 4

Question Number : 95 Question Id : 48558436730 Question Type : MCQ Option Shuffling : No Is Question Mandatory : No Calculator : None Response Time : N.A Think Time : N.A Minimum Instruction Time : 0

Correct Marks : 5 Wrong Marks : 1

Question Key Details :

Key	Value
Comprehension	MCQ

اگر کسی زبان میں LEGACY کو OVTZXB لکھا جائے تو اس زبان میں GRASP کو کیسے لکھا جائے گا ؟

1. TIZHK
2. OXZNL
3. HJYGL
4. SJYIL

Options :

485584146917. 1
485584146918. 2
485584146919. 3
485584146920. 4

Question Number : 96 Question Id : 48558436731 Question Type : MCQ Option Shuffling : No Is Question Mandatory : No Calculator : None Response Time : N.A Think Time : N.A Minimum Instruction Time : 0

Correct Marks : 5 Wrong Marks : 1

Question Key Details :

Key	Value
Comprehension	MCQ

Find odd one out in given sequence

13, 25, 51, 101, 203, 406

1. 51
2. 203
3. 406
4. 25

Options :

485584146921. 1
485584146922. 2
485584146923. 3
485584146924. 4

Question Number : 96 Question Id : 48558436731 Question Type : MCQ Option Shuffling : No Is Question Mandatory : No Calculator : None Response Time : N.A Think Time : N.A Minimum Instruction Time : 0

Correct Marks : 5 Wrong Marks : 1

Question Key Details :

Key	Value
Comprehension	MCQ

नीचे दिए गए क्रम में विषम संख्या ज्ञात करें।

13, 25, 51, 101, 203, 406

1. 51

2. 203

3. 406

4. 25

Options :

485584146921. 1

485584146922. 2

485584146923. 3

485584146924. 4

Question Number : 96 Question Id : 48558436731 Question Type : MCQ Option Shuffling : No Is Question Mandatory : No Calculator : None Response Time : N.A Think Time : N.A Minimum Instruction Time : 0

Correct Marks : 5 Wrong Marks : 1

Question Key Details :

Key	Value
Comprehension	MCQ

তলৰ শৃংখলাটোত নিমিলা সংখ্যাটো চিনাক্ত কৰা

13, 25, 51, 101, 203, 406

1. 51

2. 203

3. 406

4. 25

Options :

485584146921. 1

485584146922. 2

485584146923. 3

485584146924. 4

Question Number : 96 Question Id : 48558436731 Question Type : MCQ Option Shuffling : No Is Question Mandatory : No Calculator : None Response Time : N.A Think Time : N.A Minimum Instruction Time : 0

Correct Marks : 5 Wrong Marks : 1

Question Key Details :

Key	Value
Comprehension	MCQ

প্রদত্ত ক্রমানুসারে বিজোড় খুঁজে বের করুন

13, 25, 51, 101, 203, 406

1. 51
2. 203
3. 406
4. 25

Options :

485584146921. 1
485584146922. 2
485584146923. 3
485584146924. 4

Question Number : 96 Question Id : 48558436731 Question Type : MCQ Option Shuffling : No Is Question Mandatory : No Calculator : None Response Time : N.A Think Time : N.A Minimum Instruction Time : 0

Correct Marks : 5 Wrong Marks : 1

Question Key Details :

Key	Value
Comprehension	MCQ

আপেল শ্রেণীমাং কৌঠ অেক অলগ নংবরনে অৌললৌ.

13, 25, 51, 101, 203, 406

1. 51
2. 203
3. 406
4. 25

Options :

485584146921. 1
485584146922. 2
485584146923. 3
485584146924. 4

Question Number : 96 Question Id : 48558436731 Question Type : MCQ Option Shuffling : No Is Question Mandatory : No Calculator : None Response Time : N.A Think Time : N.A Minimum Instruction Time : 0

Correct Marks : 5 Wrong Marks : 1

Question Key Details :

Key	Value
Comprehension	MCQ

ನೀಡಿರುವ ಅನುಕ್ರಮಣಿಕೆಯಲ್ಲಿ, ಗುಂಪಿಗೆ ಸೇರದ್ದನ್ನು ಗುರುತಿಸಿ:

13, 25, 51, 101, 203, 406

1. 51

2. 203

3. 406

4. 25

Options :

485584146921. 1

485584146922. 2

485584146923. 3

485584146924. 4

Question Number : 96 Question Id : 48558436731 Question Type : MCQ Option Shuffling : No Is Question Mandatory : No Calculator : None Response Time : N.A Think Time : N.A Minimum Instruction Time : 0

Correct Marks : 5 Wrong Marks : 1

Question Key Details :

Key	Value
Comprehension	MCQ

ಕ್ಯೂತ್ತത്തിൽ ಒಪರಾಂತಾತ್ ಏತ್ತ .

13, 25, 51, 101, 203, 406

1. 51

2. 203

3. 406

4. 25

Options :

485584146921. 1

485584146922. 2

485584146923. 3

485584146924. 4

Question Number : 96 Question Id : 48558436731 Question Type : MCQ Option Shuffling : No Is Question Mandatory : No Calculator : None Response Time : N.A Think Time : N.A Minimum Instruction Time : 0

Correct Marks : 5 Wrong Marks : 1

Question Key Details :

Key	Value
Comprehension	MCQ

खालील शृंखलेतील वेगळा घटक ओळखा.

13, 25, 51, 101, 203, 406

1. 51

2. 203

3. 406

4. 25

Options :

485584146921. 1

485584146922. 2

485584146923. 3

485584146924. 4

Question Number : 96 Question Id : 48558436731 Question Type : MCQ Option Shuffling : No Is Question Mandatory : No Calculator : None Response Time : N.A Think Time : N.A Minimum Instruction Time : 0

Correct Marks : 5 Wrong Marks : 1

Question Key Details :

Key	Value
Comprehension	MCQ

ପ୍ରଦତ୍ତ ଅନୁକ୍ରମରେ (sequence) ଅଭିन्न (odd) ଚିହ୍ନ ବାହାର କରନ୍ତୁ:

13, 25, 51, 101, 203, 406

1. 51

2. 203

3. 406

4. 25

Options :

485584146921. 1

485584146922. 2

485584146923. 3

485584146924. 4

Question Number : 96 Question Id : 48558436731 Question Type : MCQ Option Shuffling : No Is Question Mandatory : No Calculator : None Response Time : N.A Think Time : N.A Minimum Instruction Time : 0

Correct Marks : 5 Wrong Marks : 1

Question Key Details :

Key	Value
Comprehension	MCQ

ਦਿੱਤੇ ਗਏ ਕ੍ਰਮ ਵਿੱਚੋਂ ਵੱਖਰਾ (ਅਜੀਬ) ਲੱਭੋ :

13, 25, 51, 101, 203, 406

1. 51

2. 203

3. 406

4. 25

Options :

485584146921. 1

485584146922. 2

485584146923. 3

485584146924. 4

Question Number : 96 Question Id : 48558436731 Question Type : MCQ Option Shuffling : No Is Question Mandatory : No Calculator : None Response Time : N.A Think Time : N.A Minimum Instruction Time : 0

Correct Marks : 5 Wrong Marks : 1

Question Key Details :

Key	Value
Comprehension	MCQ

ਕੋਮਾਨੁਕ੍ਰਮਿਤ ਕੀਤੇ ਗਏ ਵਰਤੋਂ ਵਿੱਚੋਂ ਵੱਖਰਾ (ਅਜੀਬ) ਲੱਭੋ :

13, 25, 51, 101, 203, 406

1. 51

2. 203

3. 406

4. 25

Options :

485584146921. 1

485584146922. 2

485584146923. 3

485584146924. 4

Question Number : 96 Question Id : 48558436731 Question Type : MCQ Option Shuffling : No Is Question Mandatory : No Calculator : None Response Time : N.A Think Time : N.A Minimum Instruction Time : 0

Correct Marks : 5 Wrong Marks : 1

Question Key Details :

Key	Value
Comprehension	MCQ

13, 25, 51, 101, 203, 406 ترتیب میں جو مختلف ہے اسکی نشاندہی کریں :

1. 51

2. 203

3. 406

4. 25

Options :

485584146921. 1

485584146922. 2

485584146923. 3

485584146924. 4

Question Number : 96 Question Id : 48558436731 Question Type : MCQ Option Shuffling : No Is Question Mandatory : No Calculator : None Response Time : N.A Think Time : N.A Minimum Instruction Time : 0

Correct Marks : 5 Wrong Marks : 1

Question Key Details :

Key	Value
Comprehension	MCQ

اس ترتیب میں جو مختلف ہے اسکی نشاندہی کریں :

13, 25, 51, 101, 203, 406

1. 51

2. 203

3. 406

4. 25

Options :

485584146921. 1

485584146922. 2

485584146923. 3

485584146924. 4

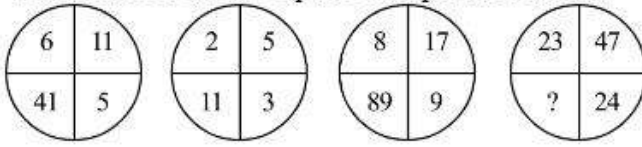
Question Number : 97 Question Id : 48558436732 Question Type : MCQ Option Shuffling : No Is Question Mandatory : No Calculator : None Response Time : N.A Think Time : N.A Minimum Instruction Time : 0

Correct Marks : 5 Wrong Marks : 1

Question Key Details :

Key	Value
Comprehension	MCQ

What number should replace the question mark ?



1. 1151

2. 94

3. 599

4. 630

Options :

485584146925. 1

485584146926. 2

485584146927. 3

485584146928. 4

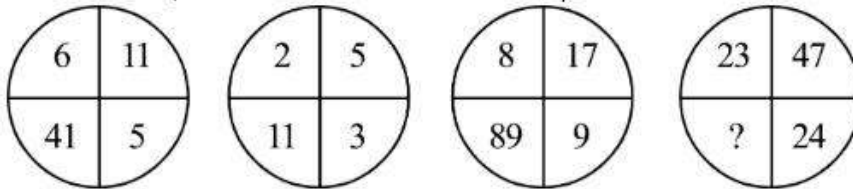
Question Number : 97 Question Id : 48558436732 Question Type : MCQ Option Shuffling : No Is Question Mandatory : No Calculator : None Response Time : N.A Think Time : N.A Minimum Instruction Time : 0

Correct Marks : 5 Wrong Marks : 1

Question Key Details :

Key	Value
Comprehension	MCQ

प्रश्नवाचक चिन्ह के स्थान पर कौन सी संख्या आएगी :



1. 1151

2. 94

3. 599

4. 630

Options :

485584146925. 1

485584146926. 2

485584146927. 3

485584146928. 4

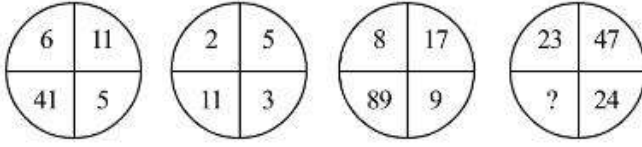
Question Number : 97 Question Id : 48558436732 Question Type : MCQ Option Shuffling : No Is Question Mandatory : No Calculator : None Response Time : N.A Think Time : N.A Minimum Instruction Time : 0

Correct Marks : 5 Wrong Marks : 1

Question Key Details :

Key	Value
Comprehension	MCQ

প্ৰশ্নচিহ্নৰ স্থানত কোনটো সংখ্যা বহিব তলৰপৰা চিনাক্ত কৰা।



1. 1151
2. 94
3. 599
4. 630

Options :

485584146925. 1
 485584146926. 2
 485584146927. 3
 485584146928. 4

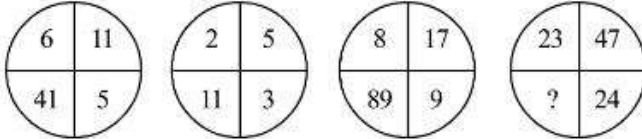
Question Number : 97 Question Id : 48558436732 Question Type : MCQ Option Shuffling : No Is Question Mandatory : No Calculator : None Response Time : N.A Think Time : N.A Minimum Instruction Time : 0

Correct Marks : 5 Wrong Marks : 1

Question Key Details :

Key	Value
Comprehension	MCQ

প্ৰশ্নচিহ্ন থাকা স্থানে কোন সংখ্যা বসবে ?



1. 1151
2. 94
3. 599
4. 630

Options :

485584146925. 1
 485584146926. 2
 485584146927. 3
 485584146928. 4

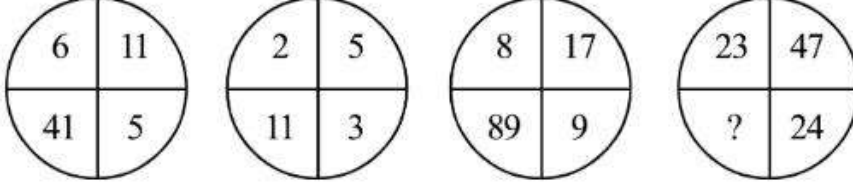
Question Number : 97 Question Id : 48558436732 Question Type : MCQ Option Shuffling : No Is Question Mandatory : No Calculator : None Response Time : N.A Think Time : N.A Minimum Instruction Time : 0

Correct Marks : 5 Wrong Marks : 1

Question Key Details :

Key	Value
Comprehension	MCQ

કયા નંબરથી પ્રશ્ન ચિહ્નને બદલી શકાય છે ?



1. 1151

2. 94

3. 599

4. 630

Options :

485584146925. 1

485584146926. 2

485584146927. 3

485584146928. 4

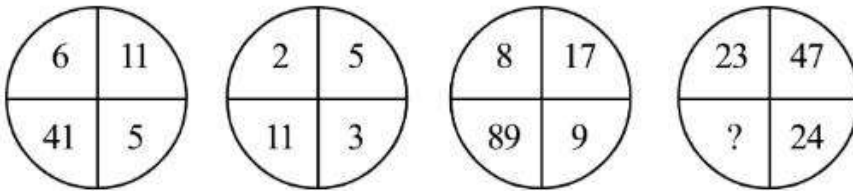
Question Number : 97 Question Id : 48558436732 Question Type : MCQ Option Shuffling : No Is Question Mandatory : No Calculator : None Response Time : N.A Think Time : N.A Minimum Instruction Time : 0

Correct Marks : 5 Wrong Marks : 1

Question Key Details :

Key	Value
Comprehension	MCQ

પ્રશ્નચિહ્નકે (?) યનુ બદલી શકાય તે સંખ્યા કયું ?



1. 1151

2. 94

3. 599

4. 630

Options :

485584146925. 1

485584146926. 2

485584146927. 3

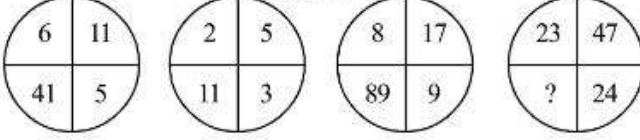
Question Number : 97 Question Id : 48558436732 Question Type : MCQ Option Shuffling : No Is Question Mandatory : No Calculator : None Response Time : N.A Think Time : N.A Minimum Instruction Time : 0

Correct Marks : 5 Wrong Marks : 1

Question Key Details :

Key	Value
Comprehension	MCQ

ചോദ്യചിഹ്നം ഉള്ള (?) സ്ഥാനത്ത് ഏത് വരും ?



1. 1151
2. 94
3. 599
4. 630

Options :

485584146925. 1
485584146926. 2
485584146927. 3
485584146928. 4

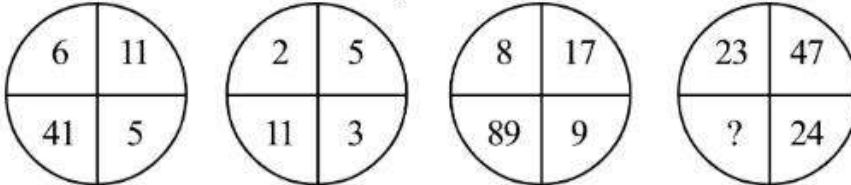
Question Number : 97 Question Id : 48558436732 Question Type : MCQ Option Shuffling : No Is Question Mandatory : No Calculator : None Response Time : N.A Think Time : N.A Minimum Instruction Time : 0

Correct Marks : 5 Wrong Marks : 1

Question Key Details :

Key	Value
Comprehension	MCQ

प्रश्नचिन्हाच्या जागी कोणता अंक येईल?



1. 1151
2. 94
3. 599
4. 630

Options :

485584146925. 1

485584146926. 2
485584146927. 3
485584146928. 4

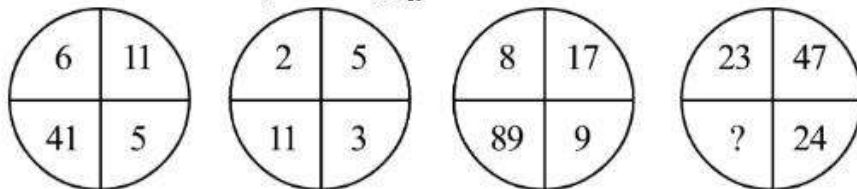
Question Number : 97 Question Id : 48558436732 Question Type : MCQ Option Shuffling : No Is Question Mandatory : No Calculator : None Response Time : N.A Think Time : N.A Minimum Instruction Time : 0

Correct Marks : 5 Wrong Marks : 1

Question Key Details :

Key	Value
Comprehension	MCQ

କେଉଁ ସଂଖ୍ୟାଟି ପ୍ରଶ୍ନ ଚିହ୍ନ ଥିବା ସ୍ଥାନରେ ପୂରଣ କରି ପାରିବ?



1. 1151
2. 94
3. 599
4. 630

Options :

485584146925. 1
485584146926. 2
485584146927. 3
485584146928. 4

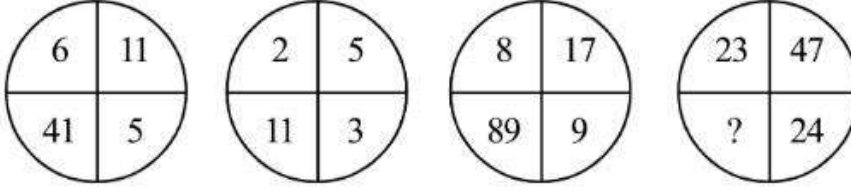
Question Number : 97 Question Id : 48558436732 Question Type : MCQ Option Shuffling : No Is Question Mandatory : No Calculator : None Response Time : N.A Think Time : N.A Minimum Instruction Time : 0

Correct Marks : 5 Wrong Marks : 1

Question Key Details :

Key	Value
Comprehension	MCQ

ਪ੍ਰਸ਼ਨ ਚਿੰਨ੍ਹ ਦੀ ਥਾਂ ਕਿਹੜੀ ਸੰਖਿਆ ਹੋਣੀ ਚਾਹੀਦੀ ਹੈ?



1. 1151
2. 94
3. 599
4. 630

Options :

485584146925. 1
485584146926. 2
485584146927. 3
485584146928. 4

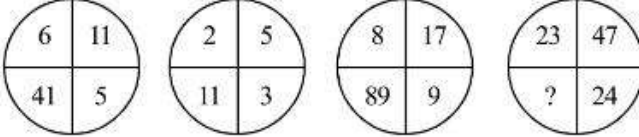
Question Number : 97 Question Id : 48558436732 Question Type : MCQ Option Shuffling : No Is Question Mandatory : No Calculator : None Response Time : N.A Think Time : N.A Minimum Instruction Time : 0

Correct Marks : 5 Wrong Marks : 1

Question Key Details :

Key	Value
Comprehension	MCQ

கேள்விக் குறியிடப்பட்டுள்ள இடத்தை நிரப்பும் எண் எது ?



1. 1151
2. 94
3. 599
4. 630

Options :

485584146925. 1
485584146926. 2
485584146927. 3
485584146928. 4

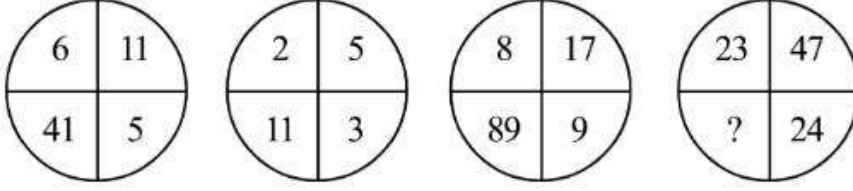
Question Number : 97 Question Id : 48558436732 Question Type : MCQ Option Shuffling : No Is Question Mandatory : No Calculator : None Response Time : N.A Think Time : N.A Minimum Instruction Time : 0

Correct Marks : 5 Wrong Marks : 1

Question Key Details :

Key	Value
Comprehension	MCQ

ప్రశ్నార్థకం ను పూర్తిచేసే సంఖ్య ఏమిటి?



1. 1151

2. 94

3. 599

4. 630

Options :

485584146925. 1

485584146926. 2

485584146927. 3

485584146928. 4

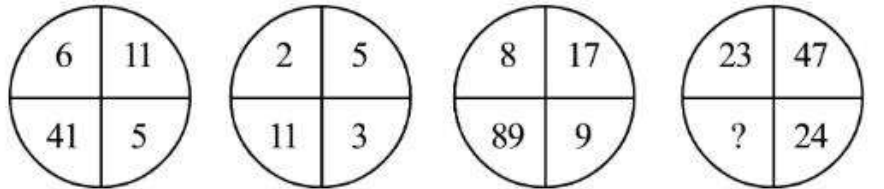
Question Number : 97 Question Id : 48558436732 Question Type : MCQ Option Shuffling : No Is Question Mandatory : No Calculator : None Response Time : N.A Think Time : N.A Minimum Instruction Time : 0

Correct Marks : 5 Wrong Marks : 1

Question Key Details :

Key	Value
Comprehension	MCQ

سوالیہ نشان کی جگہ کیا آئے گا ؟



1. 1151

2. 94

3. 599

4. 630

Options :

485584146925. 1

485584146926. 2

485584146927. 3

Question Number : 98 Question Id : 48558436733 Question Type : MCQ Option Shuffling : No Is Question Mandatory : No Calculator : None Response Time : N.A Think Time : N.A Minimum Instruction Time : 0

Correct Marks : 5 Wrong Marks : 1

Question Key Details :

Key	Value
Comprehension	MCQ

In the following question, two numbers given on the left of the sign (: :) are related in some way. Find the numbers having the same relationship with the number given to the right of the sign (: :)

729 : 7 : : 9621 : ?

1. 18
2. 19
3. 20
4. 21

Options :

485584146929. 1
485584146930. 2
485584146931. 3
485584146932. 4

Question Number : 98 Question Id : 48558436733 Question Type : MCQ Option Shuffling : No Is Question Mandatory : No Calculator : None Response Time : N.A Think Time : N.A Minimum Instruction Time : 0

Correct Marks : 5 Wrong Marks : 1

Question Key Details :

Key	Value
Comprehension	MCQ

निम्न प्रश्न में (: :) चिन्ह के बाईं तरफ दी गई दो संख्याएँ एक दूसरे से किसी न किसी तरीके से संबंधित हैं। (: :) चिन्ह के दाईं तरफ उसी संबंध को ज्ञात करें:

729 : 7 : : 9621 : ?

1. 18
2. 19
3. 20
4. 21

Options :

485584146929. 1
485584146930. 2
485584146931. 3
485584146932. 4

Question Number : 98 Question Id : 48558436733 Question Type : MCQ Option Shuffling : No Is Question Mandatory : No Calculator : None Response Time : N.A Think Time : N.A Minimum Instruction Time : 0

Correct Marks : 5 Wrong Marks : 1

Question Key Details :

Key	Value
Comprehension	MCQ

তলত দিয়া প্রশ্নটিত, (::) চিহ্নটোৰ বাঁওফালে দিয়া সংখ্যাৰ মাজত এটা সম্পর্ক আছে। (::) চিহ্নটোৰ সোঁফালে দিয়া সংখ্যাটোৰ লগত সেই একেই সম্পর্ক স্থাপন কৰা সংখ্যাটো চিনাক্ত কৰা।

729 : 7 :: 9621 : ?

1. 18

2. 19

3. 20

4. 21

Options :

485584146929. 1

485584146930. 2

485584146931. 3

485584146932. 4

Question Number : 98 Question Id : 48558436733 Question Type : MCQ Option Shuffling : No Is Question Mandatory : No Calculator : None Response Time : N.A Think Time : N.A Minimum Instruction Time : 0

Correct Marks : 5 Wrong Marks : 1

Question Key Details :

Key	Value
Comprehension	MCQ

নীচের প্রশ্নে, বাঁদিকে দুটি সংখ্যার চিহ্ন (::) একইভাবে সম্পর্কযুক্ত। ডানদিকের চিহ্ন (::) দেওয়া প্রদত্ত সংখ্যার সাথে একই সম্পর্কযুক্ত সংখ্যাগুলি সন্ধান করুন

729 : 7 :: 9621 : ?

1. 18

2. 19

3. 20

4. 21

Options :

485584146929. 1

485584146930. 2

485584146931. 3

485584146932. 4

Question Number : 98 Question Id : 48558436733 Question Type : MCQ Option Shuffling : No Is Question Mandatory : No Calculator : None Response Time : N.A Think Time : N.A Minimum Instruction Time : 0

Correct Marks : 5 Wrong Marks : 1

Question Key Details :

Key	Value
Comprehension	MCQ

નીચેના પ્રશ્નમાં, (:) ચિહ્નની ડાબી બાજુએ આપેલી બે સંખ્યાઓ અમુક રીતે સંબંધિત છે ચિહ્ન (:) ની જમણી બાજુએ આપેલ સંખ્યા સાથે સમાન સંબંધ ધરાવતી સંખ્યાઓ શોધો.

729 : 7 :: 9621 : ?

1. 18

2. 19

3. 20

4. 21

Options :

485584146929. 1

485584146930. 2

485584146931. 3

485584146932. 4

Question Number : 98 Question Id : 48558436733 Question Type : MCQ Option Shuffling : No Is Question Mandatory : No Calculator : None Response Time : N.A Think Time : N.A Minimum Instruction Time : 0

Correct Marks : 5 Wrong Marks : 1

Question Key Details :

Key	Value
Comprehension	MCQ

કેલગિન પ્રશ્નમાં, (:) ય એકભાગદલ્લિ નીડરુવ ઁરડુ સંખ્યેગલુ યાવુદેલુ ઁડુ રીડીયલ્લિ સંબંધીસીદવાગીવે. ઁહ્લેય (:) બલકે નીડરુવ સંખ્યેગે અદે રીડીયલ્લિ સંબંધીસીદ સંખ્યેયનુ કંડુહીડીયીરિ:

729 : 7 :: 9621 : ?

1. 18

2. 19

3. 20

4. 21

Options :

485584146929. 1

485584146930. 2

485584146931. 3

485584146932. 4

Question Number : 98 Question Id : 48558436733 Question Type : MCQ Option Shuffling : No Is Question Mandatory : No Calculator : None Response Time : N.A Think Time : N.A Minimum Instruction Time : 0

Correct Marks : 5 Wrong Marks : 1

Question Key Details :

Key	Value
Comprehension	MCQ

(: :) അടയാളത്തിന് ഇടത് വശമുള്ള 2 സംഖ്യകൾ തമ്മിൽ ഏതോ രീതിയിൽ ബന്ധപ്പെട്ടിരിക്കുന്നു. എങ്കിൽ അതേ ബന്ധം വച്ച് (: :) വലത് വശം വരുന്ന സംഖ്യ ഏത് ?

729 : 7 :: 9621 : ?

1. 18

2. 19

3. 20

4. 21

Options :

485584146929. 1

485584146930. 2

485584146931. 3

485584146932. 4

Question Number : 98 Question Id : 48558436733 Question Type : MCQ Option Shuffling : No Is Question Mandatory : No Calculator : None Response Time : N.A Think Time : N.A Minimum Instruction Time : 0

Correct Marks : 5 Wrong Marks : 1

Question Key Details :

Key	Value
Comprehension	MCQ

पुढील प्रश्नात (: :) चिन्हाच्या डाव्या बाजूला दिलेल्या दोन संख्यांमध्ये काही प्रमाणात परस्पर संबंध आहे. त्याचप्रमाणे (: :) चिन्हाच्या उजव्या बाजूला दिलेल्या संख्येशी समान परस्पर संबंध असणारी संख्या शोधा.

729 : 7 :: 9621 : ?

1. 18

2. 19

3. 20

4. 21

Options :

485584146929. 1

485584146930. 2

485584146931. 3

485584146932. 4

Question Number : 98 Question Id : 48558436733 Question Type : MCQ Option Shuffling : No Is Question Mandatory : No Calculator : None Response Time : N.A Think Time : N.A Minimum Instruction Time : 0

Correct Marks : 5 Wrong Marks : 1

Question Key Details :

Key	Value
Comprehension	MCQ

ନିମ୍ନ ପ୍ରଶ୍ନଟିର, ଚିହ୍ନ (:) ର ବାମ ପଟକୁ ଦିଆଯାଇଥିବା ଦୁଇଟି ସଂଖ୍ୟା କିଛି ପ୍ରକାରରେ ସମ୍ବନ୍ଧୀୟ। ସେହି ସଂଖ୍ୟାଟିକୁ ଖୋଜି ବାହାର କରନ୍ତୁ ଯାହା ଠିକ୍ ସେହିପରି ସମ୍ବନ୍ଧ ଥାଇ ଚିହ୍ନ (:) ର ଡାହାଣ ପଟରେ ରହି ପାରିବ?

729 : 7 :: 9621 : ?

1. 18
2. 19
3. 20
4. 21

Options :

485584146929. 1
485584146930. 2
485584146931. 3
485584146932. 4

Question Number : 98 Question Id : 48558436733 Question Type : MCQ Option Shuffling : No Is Question Mandatory : No Calculator : None Response Time : N.A Think Time : N.A Minimum Instruction Time : 0

Correct Marks : 5 Wrong Marks : 1

Question Key Details :

Key	Value
Comprehension	MCQ

ਹੇਠਾਂ ਦਿੱਤੇ ਸਵਾਲ ਵਿੱਚ ਚਿੰਨ੍ਹ (:) ਦੇ ਖੱਬੇ ਪਾਸੇ ਦਿੱਤੇ ਗਏ ਦੋ ਨੰਬਰ ਇੱਕ ਤਰੀਕੇ ਨਾਲ ਸੰਬੰਧਿਤ ਹਨ। ਚਿੰਨ੍ਹ ਦੇ ਸੱਜੇ ਪਾਸੇ ਦਿੱਤੇ ਨੰਬਰ ਨਾਲ ਸਮਾਨ ਸੰਬੰਧ ਰੱਖਣ ਵਾਲੀ ਸੰਖਿਆ ਲੱਭੋ (:)

729 : 7 :: 9621 : ?

1. 18
2. 19
3. 20
4. 21

Options :

485584146929. 1
485584146930. 2
485584146931. 3
485584146932. 4

Question Number : 98 Question Id : 48558436733 Question Type : MCQ Option Shuffling : No Is Question Mandatory : No Calculator : None Response Time : N.A Think Time : N.A Minimum Instruction Time : 0

Correct Marks : 5 Wrong Marks : 1

Question Key Details :

Key	Value
Comprehension	MCQ

பின்வரும் கேள்வியில், (::) என்ற குறிக்கு இடதுபுறம் கொடுக்கப்பட்டுள்ள இரண்டு எண்கள் ஒரு விதத்தில் தொடர்புடையவை. அதே விதத்தில் தொடர்புடைய (::) என்ற குறிக்கு வலதுபுறம் உள்ள எண்ணைக் கண்டறிக.

729 : 7 :: 9621 : ?

1. 18

2. 19

3. 20

4. 21

Options :

485584146929. 1

485584146930. 2

485584146931. 3

485584146932. 4

Question Number : 98 Question Id : 48558436733 Question Type : MCQ Option Shuffling : No Is Question Mandatory : No Calculator : None Response Time : N.A Think Time : N.A Minimum Instruction Time : 0

Correct Marks : 5 Wrong Marks : 1

Question Key Details :

Key	Value
Comprehension	MCQ

கீழ்க்கண்ட விவரத்தில், (::) க்கு எதிரொலிப்பு ரெண்டு సంఖ్యలు ఒక రకం సంబంధం కలిగి ఉన్నాయి. (::) కు కుడివైపు సంఖ్యలకు అదే సంబంధం ఉండేలా కనుక్కోండి.

729 : 7 :: 9621 : ?

1. 18

2. 19

3. 20

4. 21

Options :

485584146929. 1

485584146930. 2

485584146931. 3

485584146932. 4

Question Number : 98 Question Id : 48558436733 Question Type : MCQ Option Shuffling : No Is Question Mandatory : No Calculator : None Response Time : N.A Think Time : N.A Minimum Instruction Time : 0

Correct Marks : 5 Wrong Marks : 1

Question Key Details :

Key	Value
Comprehension	MCQ

مندرجہ ذیل سوال میں دو نمبر جو اس نشان (: :) کے بائیں جانب ہیں ان کا کچھ ایسی تعلق ہے۔ اس نشان کے دائیں جانب نمبروں کی نشاندہی کریں جن کے درمیان وہی تعلق ہے ؟

729 : 7 :: 9621 : ?

1. 18

2. 19

3. 20

4. 21

Options :

485584146929. 1

485584146930. 2

485584146931. 3

485584146932. 4

Question Number : 99 Question Id : 48558436734 Question Type : MCQ Option Shuffling : No Is Question Mandatory : No Calculator : None Response Time : N.A Think Time : N.A Minimum Instruction Time : 0

Correct Marks : 5 Wrong Marks : 1

Question Key Details :

Key	Value
Comprehension	MCQ

Pointing to Ashok, a lady said, "His mother is the only daughter of my mother". How is the lady related to Ashok ?

1. Mother

2. Daughter

3. Sister

4. Aunt

Options :

485584146933. 1

485584146934. 2

485584146935. 3

485584146936. 4

Question Number : 99 Question Id : 48558436734 Question Type : MCQ Option Shuffling : No Is Question Mandatory : No Calculator : None Response Time : N.A Think Time : N.A Minimum Instruction Time : 0

Correct Marks : 5 Wrong Marks : 1

Question Key Details :

Key	Value
Comprehension	MCQ

एक महिला ने अशोक की तरफ संकेत करते हुए कहा, "इसकी माँ, मेरी माँ की एकमात्र बेटी है।" उस महिला का अशोक से क्या संबंध है ?

1. माँ
2. बेटी
3. बहिन
4. चाची

Options :

485584146933. 1
485584146934. 2
485584146935. 3
485584146936. 4

Question Number : 99 Question Id : 48558436734 Question Type : MCQ Option Shuffling : No Is Question Mandatory : No Calculator : None Response Time : N.A Think Time : N.A Minimum Instruction Time : 0

Correct Marks : 5 Wrong Marks : 1

Question Key Details :

Key	Value
Comprehension	MCQ

অশোকৰ পিনে আঙুলিয়াই এজনী মহিলাই কলে, "তেওঁৰ মাক মোৰ মাৰ একমাত্ৰ জীয়ৰী"। সেই মহিলা জনীৰ অশোকৰ সৈতে সম্পর্ক কি?

1. মাক
2. জীয়েক
3. ভনীয়েক
4. খুড়ী

Options :

485584146933. 1
485584146934. 2
485584146935. 3
485584146936. 4

Question Number : 99 Question Id : 48558436734 Question Type : MCQ Option Shuffling : No Is Question Mandatory : No Calculator : None Response Time : N.A Think Time : N.A Minimum Instruction Time : 0

Correct Marks : 5 Wrong Marks : 1

Question Key Details :

Key	Value
Comprehension	MCQ

અશોકને ઇશારા કરે એકજન મહિલા બલે "તાર મા આમાર માયેર એકમાત્ર કન્યા" । અશોકેર સાથે સેઈ મહિલાર સમ્પર્ક કિ?

1. મા
2. કન્યા
3. બોન
4. કાકિમા

Options :

485584146933. 1
485584146934. 2
485584146935. 3
485584146936. 4

Question Number : 99 Question Id : 48558436734 Question Type : MCQ Option Shuffling : No Is Question Mandatory : No Calculator : None Response Time : N.A Think Time : N.A Minimum Instruction Time : 0

Correct Marks : 5 Wrong Marks : 1

Question Key Details :

Key	Value
Comprehension	MCQ

અશોક સામે ઈશારો કરીને એક મહિલા કહે છે કે "તેની માતા એ મારા માતાની એક માત્ર દિકરી થાય છે." તે મહિલા અશોક થી કેવી રીતે જોડાયેલી છે ?

1. માતા
2. પુત્રી
3. બહેન
4. કાકી

Options :

485584146933. 1
485584146934. 2
485584146935. 3
485584146936. 4

Question Number : 99 Question Id : 48558436734 Question Type : MCQ Option Shuffling : No Is Question Mandatory : No Calculator : None Response Time : N.A Think Time : N.A Minimum Instruction Time : 0

Correct Marks : 5 Wrong Marks : 1

Question Key Details :

Key	Value
Comprehension	MCQ

"ಅವನ ತಾಯಿಯು ನನ್ನ ತಾಯಿಯ ಒಬ್ಬಳೇ ಮಗಳು" ಎಂದು ಒಬ್ಬ ಸ್ತ್ರೀಯು ಅಶೋಕನನ್ನು ಕೇಂದ್ರೀಕರಿಸಿ ಹೇಳಿದಳು. ಸ್ತ್ರೀಯು ಅಶೋಕನಿಗೆ ಹೇಗೆ ಸಂಬಂಧಿಕಳಾಗಿದ್ದಾಳೆ?

1. ತಾಯಿ
2. ಮಗಳು
3. ಸಹೋದರಿ
4. ಚಿಕ್ಕಮ್ಮ

Options :

485584146933. 1
485584146934. 2
485584146935. 3
485584146936. 4

Question Number : 99 Question Id : 48558436734 Question Type : MCQ Option Shuffling : No Is Question Mandatory : No Calculator : None Response Time : N.A Think Time : N.A Minimum Instruction Time : 0

Correct Marks : 5 Wrong Marks : 1

Question Key Details :

Key	Value
Comprehension	MCQ

ಅಶೋಕನಿಗೆ ಒಬ್ಬಳೇ ಮಗಳು ಎಂದು ಒಬ್ಬ ಸ್ತ್ರೀಯು ಅಶೋಕನನ್ನು ಕೇಂದ್ರೀಕರಿಸಿ ಹೇಳಿದಳು. ಸ್ತ್ರೀಯು ಅಶೋಕನಿಗೆ ಹೇಗೆ ಸಂಬಂಧಿಕಳಾಗಿದ್ದಾಳೆ?

1. ಅಮ್ಮ
2. ಮಗಳು
3. ಸಹೋದರಿ
4. ಮಾಮಿ/ ಅಕ್ಕ

Options :

485584146933. 1
485584146934. 2
485584146935. 3
485584146936. 4

Question Number : 99 Question Id : 48558436734 Question Type : MCQ Option Shuffling : No Is Question Mandatory : No Calculator : None Response Time : N.A Think Time : N.A Minimum Instruction Time : 0

Correct Marks : 5 Wrong Marks : 1

Question Key Details :

Key	Value
Comprehension	MCQ

अशोककडे निर्देश करुन एक महिला म्हणाली की, "त्याची आई ही माझ्या आईची एकुलती एक मुलगी आहे." तर त्या महिलेचे अशोकशी नाते काय?

1. आई
2. मुलगी
3. बहीण
4. मावशी

Options :

485584146933. 1
485584146934. 2
485584146935. 3
485584146936. 4

Question Number : 99 Question Id : 48558436734 Question Type : MCQ Option Shuffling : No Is Question Mandatory : No Calculator : None Response Time : N.A Think Time : N.A Minimum Instruction Time : 0

Correct Marks : 5 Wrong Marks : 1

Question Key Details :

Key	Value
Comprehension	MCQ

ଅଶୋକ ଆଡ଼କୁ ଆଜ୍ଞାପି ଦେଖାଇ ଜଣେ ଭଦ୍ର ମହିଳା କହିଲେ, "ତାଙ୍କ ମାଆ ମୋ ମାଆଙ୍କର ଏକ ମାତ୍ର ଝିଅ" । ତାହାହେଲେ ଭଦ୍ର ମହିଳାଙ୍କ ଅଶୋକସହିତ କି ସମ୍ପର୍କ?

1. ମାଆ
2. ଝିଅ
3. ଭଉଣୀ
4. ଖୁଡ଼ି/ମାଉ/ମାଉସୀ/ପିଉସୀ (Aunt)

Options :

485584146933. 1
485584146934. 2
485584146935. 3
485584146936. 4

Question Number : 99 Question Id : 48558436734 Question Type : MCQ Option Shuffling : No Is Question Mandatory : No Calculator : None Response Time : N.A Think Time : N.A Minimum Instruction Time : 0

Correct Marks : 5 Wrong Marks : 1

Question Key Details :

Key	Value
Comprehension	MCQ

ਅਸ਼ੋਕ ਦੀ ਤਰਫ਼ ਇਸ਼ਾਰਾ ਕਰਕੇ ਇੱਕ ਔਰਤ ਨੇ ਕਿਹਾ ਕਿ " ਉਸਦੀ ਮਾਂ ਮੇਰੀ ਮਾਂ ਦੀ ਇੱਕਲੌਤੀ ਧੀ ਹੈ " । ਉਸ ਔਰਤ ਦਾ ਅਸ਼ੋਕ ਨਾਲ ਕੀ ਸਬੰਧ ਹੈ?

1. ਮਾਂ
2. ਪੁੱਤਰੀ / ਧੀ
3. ਭੈਣ
4. ਆਂਟੀ

Options :

485584146933. 1
485584146934. 2
485584146935. 3
485584146936. 4

Question Number : 99 Question Id : 48558436734 Question Type : MCQ Option Shuffling : No Is Question Mandatory : No Calculator : None Response Time : N.A Think Time : N.A Minimum Instruction Time : 0

Correct Marks : 5 Wrong Marks : 1

Question Key Details :

Key	Value
Comprehension	MCQ

ਓਰੁ ਪੇਠਨ, ਅਫ਼ੋਸਾਕੁ ਏਨਪਰੇ ਕਾਟੁਪਿ, "ਅਵਰਠੁ ਅਮਮਾ ਏਨਠੁ ਅਮਮਾਵਿਨ ਓਰੇ ਮਕਲ" ਏਨਕਿਠਾਰ. ਏਨਿਲ ਅਨਠਪੁ ਪੇਠਨਨੁਕੁਕੁਮੁ ਅਫ਼ੋਸਾਕੁਕਿਠੁਕੁਮੁ ਓਦੇਏ ਏਲਲ ਏਰਵੁ?

1. ਅਮਮਾ
2. ਮਕਲ
3. ਸਕੋਕਾਠਰੀ
4. ਅਠਠੇਠ

Options :

485584146933. 1
485584146934. 2
485584146935. 3
485584146936. 4

Question Number : 99 Question Id : 48558436734 Question Type : MCQ Option Shuffling : No Is Question Mandatory : No Calculator : None Response Time : N.A Think Time : N.A Minimum Instruction Time : 0

Correct Marks : 5 Wrong Marks : 1

Question Key Details :

Key	Value
Comprehension	MCQ

అశోక్ ని సూచిస్తూ ఒక మహిళ ఇలా అంది, "నా తల్లి యొక్క ఏకైక కుమార్తె అతని తల్లి". అశోక్ కి మహిళ కలిగి ఉన్న సంబంధం ?

1. తల్లి
2. కుమార్తె
3. సోదరి
4. అత్త

Options :

485584146933. 1
485584146934. 2
485584146935. 3
485584146936. 4

Question Number : 99 Question Id : 48558436734 Question Type : MCQ Option Shuffling : No Is Question Mandatory : No Calculator : None Response Time : N.A Think Time : N.A Minimum Instruction Time : 0

Correct Marks : 5 Wrong Marks : 1

Question Key Details :

Key	Value
Comprehension	MCQ

اشوك كى سمت اشارہ کرتے ہوئے ایک عورت نے کہا " اس كى ماں ميرى ماں كى اكلوتى بيٺى ہے " اس عورت كا اشوك كے ساتھ كيا تعلق ہے ؟

1. ماں
2. بيٺى
3. بہن
4. خالہ

Options :

485584146933. 1
485584146934. 2
485584146935. 3
485584146936. 4

Question Number : 100 Question Id : 48558436735 Question Type : MCQ Option Shuffling : No Is Question Mandatory : No Calculator : None Response Time : N.A Think Time : N.A Minimum Instruction Time : 0

Correct Marks : 5 Wrong Marks : 1

Question Key Details :

Key	Value
Comprehension	MCQ

I have a calendar of year 1597. When can I use it again ?

1. 1602
2. 1603
3. 1609
4. 1608

Options :

485584146937. 1
485584146938. 2
485584146939. 3
485584146940. 4

Question Number : 100 Question Id : 48558436735 Question Type : MCQ Option Shuffling : No Is Question Mandatory : No Calculator : None Response Time : N.A Think Time : N.A Minimum Instruction Time : 0

Correct Marks : 5 Wrong Marks : 1

Question Key Details :

Key	Value
Comprehension	MCQ

मेरे पास वर्ष 1597 का एक कैलेंडर है। मैं उसका प्रयोग फिर से कब कर सकता हूँ:

1. 1602
2. 1603
3. 1609
4. 1608

Options :

485584146937. 1
485584146938. 2
485584146939. 3
485584146940. 4

Question Number : 100 Question Id : 48558436735 Question Type : MCQ Option Shuffling : No Is Question Mandatory : No Calculator : None Response Time : N.A Think Time : N.A Minimum Instruction Time : 0

Correct Marks : 5 Wrong Marks : 1

Question Key Details :

Key	Value
Comprehension	MCQ

মোৰ ওচৰত 1597 বৰ্ষৰ কেলেণ্ডাৰ এখন আছে।। মই সেইখন আকৌ কেতিয়া ব্যৱহাৰ কৰিব পাৰিম ?

1. 1602
2. 1603
3. 1609
4. 1608

Options :

485584146937. 1
485584146938. 2
485584146939. 3
485584146940. 4

Question Number : 100 Question Id : 48558436735 Question Type : MCQ Option Shuffling : No Is Question Mandatory : No Calculator : None Response Time : N.A Think Time : N.A Minimum Instruction Time : 0

Correct Marks : 5 Wrong Marks : 1

Question Key Details :

Key	Value
Comprehension	MCQ

আমাৰ 1597 সালৰ একাটি ক্যালেন্ডাৰ আছে। আমি আবার কখন এটি ব্যৱহাৰ করতে পাৰি ?

1. 1602
2. 1603
3. 1609
4. 1608

Options :

485584146937. 1
485584146938. 2
485584146939. 3
485584146940. 4

Question Number : 100 Question Id : 48558436735 Question Type : MCQ Option Shuffling : No Is Question Mandatory : No Calculator : None Response Time : N.A Think Time : N.A Minimum Instruction Time : 0

Correct Marks : 5 Wrong Marks : 1

Question Key Details :

Key	Value
Comprehension	MCQ

મારી પાસે 1597 નું કેલેન્ડર છે. હું ક્યારે તેને ફરી વાપરી શકું છું ?

1. 1602
2. 1603
3. 1609
4. 1608

Options :

485584146937. 1
485584146938. 2
485584146939. 3
485584146940. 4

Question Number : 100 Question Id : 48558436735 Question Type : MCQ Option Shuffling : No Is Question Mandatory : No Calculator : None Response Time : N.A Think Time : N.A Minimum Instruction Time : 0

Correct Marks : 5 Wrong Marks : 1

Question Key Details :

Key	Value
Comprehension	MCQ

ನನ್ನ ಹತ್ತಿರ 1597 નೇ વರ್ಷದ ಕ್ಯಾಲೆન્ડರ್ ಇದೆ. ನಾನು ಅದನ್ನು પુನઃ યાવાગ બಳસબહુદુ?

1. 1602
2. 1603
3. 1609
4. 1608

Options :

485584146937. 1
485584146938. 2
485584146939. 3
485584146940. 4

Question Number : 100 Question Id : 48558436735 Question Type : MCQ Option Shuffling : No Is Question Mandatory : No Calculator : None Response Time : N.A Think Time : N.A Minimum Instruction Time : 0

Correct Marks : 5 Wrong Marks : 1

Question Key Details :

Key	Value
Comprehension	MCQ

എന്റെ കയ്യിൽ 1597 വർഷത്തെ ഒരു കലണ്ടർ ഉണ്ട്. ഇനി അത് എനിക്ക് എപ്പോൾ ഉപയോഗിക്കാം ?

1. 1602
2. 1603
3. 1609
4. 1608

Options :

485584146937. 1
485584146938. 2
485584146939. 3
485584146940. 4

Question Number : 100 Question Id : 48558436735 Question Type : MCQ Option Shuffling : No Is Question Mandatory : No Calculator : None Response Time : N.A Think Time : N.A Minimum Instruction Time : 0

Correct Marks : 5 Wrong Marks : 1

Question Key Details :

Key	Value
Comprehension	MCQ

माझ्याजवळ 1597 सालची दिनदर्शिका आहे. मी पुन्हा ती केव्हा वापरू शकेन?

1. 1602
2. 1603
3. 1609
4. 1608

Options :

485584146937. 1
485584146938. 2
485584146939. 3
485584146940. 4

Question Number : 100 Question Id : 48558436735 Question Type : MCQ Option Shuffling : No Is Question Mandatory : No Calculator : None Response Time : N.A Think Time : N.A Minimum Instruction Time : 0

Correct Marks : 5 Wrong Marks : 1

Question Key Details :

Key	Value
Comprehension	MCQ

ମୋ ପାଞ୍ଜର 1597 ର ଗୋଟିଏ ଜ୍ୟାଲୋଭର ଅଛି। ମୁଁ ତାକୁ କେବେ ପୁଣି ବ୍ୟବହାର କରିପାରିବି?

1. 1602
2. 1603
3. 1609
4. 1608

Options :

485584146937. 1
485584146938. 2
485584146939. 3
485584146940. 4

Question Number : 100 Question Id : 48558436735 Question Type : MCQ Option Shuffling : No Is Question Mandatory : No Calculator : None Response Time : N.A Think Time : N.A Minimum Instruction Time : 0

Correct Marks : 5 Wrong Marks : 1

Question Key Details :

Key	Value
Comprehension	MCQ

ମେରେ କੋਲ ମାଲ 1597 ਦਾ କੈଲେଣ୍ଡର ਹੈ। ମੈ ਉਸନੂੰ ਦୁਬାରା ਕର୍ଡੋ ਪୁଞ୍ଜେଗା ਵਿੱଚ ਲਿਆ ਸକਦା ହାଁ?

1. 1602
2. 1603
3. 1609
4. 1608

Options :

485584146937. 1
485584146938. 2
485584146939. 3
485584146940. 4

Question Number : 100 Question Id : 48558436735 Question Type : MCQ Option Shuffling : No Is Question Mandatory : No Calculator : None Response Time : N.A Think Time : N.A Minimum Instruction Time : 0

Correct Marks : 5 Wrong Marks : 1

Question Key Details :

Key	Value
Comprehension	MCQ

என்னிடம் 1597 ஆண்டின் நாட்காட்டி (காலெண்டர்) உள்ளது. அதை எப்போது நான் மீண்டும் பயன்படுத்த முடியும் ?

1. 1602
2. 1603
3. 1609
4. 1608

Options :

485584146937. 1
485584146938. 2
485584146939. 3
485584146940. 4

Question Number : 100 Question Id : 48558436735 Question Type : MCQ Option Shuffling : No Is Question Mandatory : No Calculator : None Response Time : N.A Think Time : N.A Minimum Instruction Time : 0

Correct Marks : 5 Wrong Marks : 1

Question Key Details :

Key	Value
Comprehension	MCQ

నా దగ్గర 1597 సంవత్సరం క్యాలెండర్ ఉంది. నేను మళ్ళీ దానిని ఎప్పుడు ఉపయోగించవచ్చు ?

1. 1602
2. 1603
3. 1609
4. 1608

Options :

485584146937. 1
485584146938. 2
485584146939. 3
485584146940. 4

Question Number : 100 Question Id : 48558436735 Question Type : MCQ Option Shuffling : No Is Question Mandatory : No Calculator : None Response Time : N.A Think Time : N.A Minimum Instruction Time : 0

Correct Marks : 5 Wrong Marks : 1

Question Key Details :

Key	Value
Comprehension	MCQ

میرے پاس سن 1597ء کا کلینڈر ہے۔ اس کو میں دوبارہ کب استعمال کر سکتا ہوں؟

1. 1602
2. 1603
3. 1609
4. 1608

Options :

485584146937. 1
485584146938. 2
485584146939. 3
485584146940. 4

Question Number : 101 Question Id : 48558436736 Question Type : MCQ Option Shuffling : No Is Question Mandatory : No Calculator : None Response Time : N.A Think Time : N.A Minimum Instruction Time : 0

Correct Marks : 5 Wrong Marks : 1

Question Key Details :

Key	Value
Comprehension	MCQ

When the minute hand covers a distance of 40 min, then what is the angular distance covered by it ?

1. 120°
2. 240°
3. 300°
4. 320°

Options :

485584146941. 1
485584146942. 2
485584146943. 3
485584146944. 4

Question Number : 101 Question Id : 48558436736 Question Type : MCQ Option Shuffling : No Is Question Mandatory : No Calculator : None Response Time : N.A Think Time : N.A Minimum Instruction Time : 0

Correct Marks : 5 Wrong Marks : 1

Question Key Details :

Key	Value
Comprehension	MCQ

जब मिनट की सुई 40 मिनटों की दूरी तय करती है तो उसके द्वारा तय की जाने वाली कोणीय दूरी कितनी होगी?

1. 120°
2. 240°
3. 300°
4. 320°

Options :

485584146941. 1
485584146942. 2
485584146943. 3
485584146944. 4

Question Number : 101 Question Id : 48558436736 Question Type : MCQ Option Shuffling : No Is Question Mandatory : No Calculator : None Response Time : N.A Think Time : N.A Minimum Instruction Time : 0

Correct Marks : 5 Wrong Marks : 1

Question Key Details :

Key	Value
Comprehension	MCQ

মিনিটৰ কাঁটাডালে 40 min দূৰত্ব অতিক্ৰম কৰোঁতে, ই অতিক্ৰম কৰা কৌণিক দূৰত্বৰ পৰিমাণ কি হ'ব ?

1. 120°
2. 240°
3. 300°
4. 320°

Options :

485584146941. 1
485584146942. 2
485584146943. 3
485584146944. 4

Question Number : 101 Question Id : 48558436736 Question Type : MCQ Option Shuffling : No Is Question Mandatory : No Calculator : None Response Time : N.A Think Time : N.A Minimum Instruction Time : 0

Correct Marks : 5 Wrong Marks : 1

Question Key Details :

Key	Value
Comprehension	MCQ

যখন মিনিটের কাঁটা 40 মিনিটের দূরত্ব অতিক্রম করে, তাহলে এটি দ্বারা আচ্ছাদিত কৌণিক দূরত্ব কত ?

1. 120°
2. 240°
3. 300°
4. 320°

Options :

485584146941. 1
485584146942. 2
485584146943. 3
485584146944. 4

Question Number : 101 Question Id : 48558436736 Question Type : MCQ Option Shuffling : No Is Question Mandatory : No Calculator : None Response Time : N.A Think Time : N.A Minimum Instruction Time : 0

Correct Marks : 5 Wrong Marks : 1

Question Key Details :

Key	Value
Comprehension	MCQ

જ્યારે મિનીટનો કાટો 40 મિનિટ યાવે છે, ત્યારે તેના દ્વારા કેટલા ખૂણાનું અંતર કાપવા માં આવે છે ?

1. 120°
2. 240°
3. 300°
4. 320°

Options :

485584146941. 1
485584146942. 2
485584146943. 3
485584146944. 4

Question Number : 101 Question Id : 48558436736 Question Type : MCQ Option Shuffling : No Is Question Mandatory : No Calculator : None Response Time : N.A Think Time : N.A Minimum Instruction Time : 0

Correct Marks : 5 Wrong Marks : 1

Question Key Details :

Key	Value
Comprehension	MCQ

ಗಡಿಯಾರದ ಚಿಕ್ಕ ಮುಳ್ಳು 40 ನಿಮಿಷಗಳ ಅಂತರವನ್ನು ತಲುಪಿದರೆ, ಆಗ ತಲುಪಿದ ಅಂತರದ ಕೋನವೇನು?

1. 120°
2. 240°
3. 300°
4. 320°

Options :

485584146941. 1
485584146942. 2
485584146943. 3
485584146944. 4

Question Number : 101 Question Id : 48558436736 Question Type : MCQ Option Shuffling : No Is Question Mandatory : No Calculator : None Response Time : N.A Think Time : N.A Minimum Instruction Time : 0

Correct Marks : 5 Wrong Marks : 1

Question Key Details :

Key	Value
Comprehension	MCQ

ಮಿನ್ನಿತ್ ಸ್ಕೂಲಿ 40 ಮಿನ್ನಿತ್ ಪಿನ್ನಿಸುನ್ಬಾಲ್, ಅತ್ ಲುಣಾಕುಯ ಕೂಾಣಿ ಅಲುವು ಅತ್ರ ?

1. 120°
2. 240°
3. 300°
4. 320°

Options :

485584146941. 1
485584146942. 2
485584146943. 3
485584146944. 4

Question Number : 101 Question Id : 48558436736 Question Type : MCQ Option Shuffling : No Is Question Mandatory : No Calculator : None Response Time : N.A Think Time : N.A Minimum Instruction Time : 0

Correct Marks : 5 Wrong Marks : 1

Question Key Details :

Key	Value
Comprehension	MCQ

जेव्हा मिनिट काटा 40 मिनिटांचे अंतर पूर्ण करतो, तेव्हा त्याने किती कोनाचे अंतर पूर्ण केले असते?

1. 120°
2. 240°
3. 300°
4. 320°

Options :

485584146941. 1
485584146942. 2
485584146943. 3
485584146944. 4

Question Number : 101 Question Id : 48558436736 Question Type : MCQ Option Shuffling : No Is Question Mandatory : No Calculator : None Response Time : N.A Think Time : N.A Minimum Instruction Time : 0

Correct Marks : 5 Wrong Marks : 1

Question Key Details :

Key	Value
Comprehension	MCQ

घेतेवेले निघू क् 40 निघू दूरताकु प्रसू करे, घेतेवेले घे केते कोणाइ दूरता (angle distance) प्रसू करे?

1. 120°
2. 240°
3. 300°
4. 320°

Options :

485584146941. 1
485584146942. 2
485584146943. 3
485584146944. 4

Question Number : 101 Question Id : 48558436736 Question Type : MCQ Option Shuffling : No Is Question Mandatory : No Calculator : None Response Time : N.A Think Time : N.A Minimum Instruction Time : 0

Correct Marks : 5 Wrong Marks : 1

Question Key Details :

Key	Value
Comprehension	MCQ

ਜਦੋਂ ਮਿੰਟ ਦੀ ਸੁਈ 40 min ਦੀ ਦੂਰੀ ਨੂੰ ਤੈਅ ਕਰਦੀ ਹੈ ਤਾਂ ਇਸ ਦੁਆਰਾ ਤੈਅ ਕੀਤੀ ਗਈ ਕੋਣ ਦੂਰੀ ਕਿੰਨੀ ਹੈ?

1. 120°
2. 240°
3. 300°
4. 320°

Options :

485584146941. 1
485584146942. 2
485584146943. 3
485584146944. 4

Question Number : 101 Question Id : 48558436736 Question Type : MCQ Option Shuffling : No Is Question Mandatory : No Calculator : None Response Time : N.A Think Time : N.A Minimum Instruction Time : 0

Correct Marks : 5 Wrong Marks : 1

Question Key Details :

Key	Value
Comprehension	MCQ

ਨਿਮਿਦ ਮੁੱਘ 40 ਨਿਮਿਦ ਤੁਰਾਤਠੈਤਕ ਕਦਕਕਿਹੁ, ਂਠੀਲ ਅਤੁ ਕਦਨੁਠ ਠੇਕਾਠ ਤੁਰਾਮ ਂਠਨ ?

1. 120°
2. 240°
3. 300°
4. 320°

Options :

485584146941. 1
485584146942. 2
485584146943. 3
485584146944. 4

Question Number : 101 Question Id : 48558436736 Question Type : MCQ Option Shuffling : No Is Question Mandatory : No Calculator : None Response Time : N.A Think Time : N.A Minimum Instruction Time : 0

Correct Marks : 5 Wrong Marks : 1

Question Key Details :

Key	Value
Comprehension	MCQ

నిమిషం ముల్లు 40 నిమిషాల దూరం జరిగినప్పుడు, అది ఎంత కోణ దూరం పూర్తిచేస్తుంది:

1. 120°
2. 240°
3. 300°
4. 320°

Options :

485584146941. 1
485584146942. 2
485584146943. 3
485584146944. 4

Question Number : 101 Question Id : 48558436736 Question Type : MCQ Option Shuffling : No Is Question Mandatory : No Calculator : None Response Time : N.A Think Time : N.A Minimum Instruction Time : 0

Correct Marks : 5 Wrong Marks : 1

Question Key Details :

Key	Value
Comprehension	MCQ

گھڑی پر جب منٹوں والی سوئی 40min منٹ کا فاصلہ طے کرتی ہے اس وقت زاوی فاصلہ کتنا طے ہوا ہے؟

1. 120°
2. 240°
3. 300°
4. 320°

Options :

485584146941. 1
485584146942. 2
485584146943. 3
485584146944. 4

Question Number : 102 Question Id : 48558436737 Question Type : MCQ Option Shuffling : No Is Question Mandatory : No Calculator : None Response Time : N.A Think Time : N.A Minimum Instruction Time : 0

Correct Marks : 5 Wrong Marks : 1

Question Key Details :

Key	Value
Comprehension	MCQ

Assertion (A) : silver is not used to make wires.

Reason (R) : silver is a bad Conductor.

1. If both 'A' and 'R' are true and 'R' is the correct explanation of 'A'
2. If 'A' is true and 'R' is false
3. If 'A' is false and 'R' is true
4. If both 'A' and 'R' are false

Options :

485584146945. 1

485584146946. 2

485584146947. 3

485584146948. 4

Question Number : 102 Question Id : 48558436737 Question Type : MCQ Option Shuffling : No Is Question Mandatory : No Calculator : None Response Time : N.A Think Time : N.A Minimum Instruction Time : 0

Correct Marks : 5 Wrong Marks : 1

Question Key Details :

Key	Value
Comprehension	MCQ

अभिकथन (A) : तार बनाने के लिए चाँदी का उपयोग नहीं किया जाता।

कारण (R) : चाँदी एक कुचालक है।

1. 'A' और 'R' दोनों सत्य हैं और 'R', 'A' की सही व्याख्या है
2. 'A' सत्य हैं और 'R' सही नहीं है
3. यदि 'A' असत्य है और 'R' सत्य है
4. यदि दोनों 'A' और 'R' असत्य हैं।

Options :

485584146945. 1

485584146946. 2

485584146947. 3

485584146948. 4

Question Number : 102 Question Id : 48558436737 Question Type : MCQ Option Shuffling : No Is Question Mandatory : No Calculator : None Response Time : N.A Think Time : N.A Minimum Instruction Time : 0

Correct Marks : 5 Wrong Marks : 1

Question Key Details :

Key	Value
Comprehension	MCQ

উক্তি (A) : তাঁৰ সজাবলৈ ৰূপ ব্যৱহাৰ কৰা নহয়।

যুক্তি (R) : ৰূপ এবিধ কুপৰিবাহী।

1. 'A' আৰু 'R' দুয়োটা শুদ্ধ আৰু 'R', 'A' ৰ শুদ্ধ ব্যাখ্যা।
2. 'A' শুদ্ধ আৰু 'R' ভুল
3. 'A' ভুল আৰু 'R' শুদ্ধ
4. 'A' আৰু 'R' দুয়োটা ভুল

Options :

485584146945. 1
485584146946. 2
485584146947. 3
485584146948. 4

Question Number : 102 Question Id : 48558436737 Question Type : MCQ Option Shuffling : No Is Question Mandatory : No Calculator : None Response Time : N.A Think Time : N.A Minimum Instruction Time : 0

Correct Marks : 5 Wrong Marks : 1

Question Key Details :

Key	Value
Comprehension	MCQ

অনুমান A : তাৰ তৈৰী কৰতে ৰূপা ব্যবহার করা হয় না.

কারণ R : ৰূপা একটি খারাপ পরিবাহী

1. যদি উভয় 'A' এবং 'R' সত্য এবং 'R' হল 'A' এর সঠিক ব্যাখ্যা
2. যদি 'A' হল সত্য 'R' হল মিথ্যা
3. যদি 'A' মিথ্যা এবং 'R' হল সত্য
4. যদি উভয় 'A' এবং 'R' হল মিথ্যা

Options :

485584146945. 1
485584146946. 2
485584146947. 3
485584146948. 4

Question Number : 102 Question Id : 48558436737 Question Type : MCQ Option Shuffling : No Is Question Mandatory : No Calculator : None Response Time : N.A Think Time : N.A Minimum Instruction Time : 0

Correct Marks : 5 Wrong Marks : 1

Question Key Details :

Key	Value
Comprehension	MCQ

કથન A : વાયર બનાવવા માટે ચાંદી ને વાપરવામાં આવતી નથી.

કારણ R : ચાંદી એ હલ્કુ વાહક (bad Conductor) છે.

1. If both 'A' and 'R' are true and 'R' is the correct explanation of 'A'
2. If 'A' is true and 'R' is false
3. If 'A' is false and 'R' is true
4. If both 'A' and 'R' are false

Options :

485584146945. 1
485584146946. 2
485584146947. 3
485584146948. 4

Question Number : 102 Question Id : 48558436737 Question Type : MCQ Option Shuffling : No Is Question Mandatory : No Calculator : None Response Time : N.A Think Time : N.A Minimum Instruction Time : 0

Correct Marks : 5 Wrong Marks : 1

Question Key Details :

Key	Value
Comprehension	MCQ

પ્રતિપાદન A : બેંજીયનનું તંત્રિ તંત્રીયારીસલુ ઇપયોગીસુવુદીલ્.

કારણ R : બેંજીયુ કૅટ્ટુ વાહકવાગીદ.

1. 'A' મત્તુ 'R' ગલૅરડુ સત્તુવાગીવે મત્તુ 'R' યુ 'A' ન સરિયુદ વીવરણૅયુગીદ
2. 'A' યુ સત્તુવાદરૅ મત્તુ 'R' યુ તપ્પુગીદ
3. 'A' યુ તપ્પુગીદ્દરૅ મત્તુ 'R' યુ સત્તુવાગીદ
4. 'A' મત્તુ 'R' ગલૅરડુ તપ્પુગીવે

Options :

485584146945. 1
485584146946. 2
485584146947. 3
485584146948. 4

Question Number : 102 Question Id : 48558436737 Question Type : MCQ Option Shuffling : No Is Question Mandatory : No Calculator : None Response Time : N.A Think Time : N.A Minimum Instruction Time : 0

Correct Marks : 5 Wrong Marks : 1

Question Key Details :

Key	Value
Comprehension	MCQ

അവകാശവാദം 'A' : വയർ ഉണ്ടാക്കാൻ വെള്ളി ഉപയോഗിക്കില്ല.

കാരണം 'R': വെള്ളി ചാലകശക്തി കുറഞ്ഞതാണ്

1. A യും R ഉം ശരിയാണ് 'R', 'A' യുടെ ശരിയായ വിശദീകരണം ആണ്
2. A ശരിയും R തെറ്റുമാണ്
3. A തെറ്റും R ശരിയുമാണ്
4. A യും R ഉം തെറ്റാണ്

Options :

485584146945. 1
485584146946. 2
485584146947. 3
485584146948. 4

Question Number : 102 Question Id : 48558436737 Question Type : MCQ Option Shuffling : No Is Question Mandatory : No Calculator : None Response Time : N.A Think Time : N.A Minimum Instruction Time : 0

Correct Marks : 5 Wrong Marks : 1

Question Key Details :

Key	Value
Comprehension	MCQ

विधान A : तारा बनविण्यासाठी चांदी वापरत नाही.

कारण R : चांदी ही दुर्वाहक आहे.

1. 'A' आणि 'R' दोन्ही बरोबर आहे आणि 'R' हे 'A' चे योग्य स्पष्टीकरण आहे
2. 'A' हे बरोबर आणि 'R' हे चूक
3. 'A' हे चूक आणि 'R' हे बरोबर
4. 'A' आणि 'R' दोन्ही चूक

Options :

485584146945. 1
485584146946. 2
485584146947. 3
485584146948. 4

Question Number : 102 Question Id : 48558436737 Question Type : MCQ Option Shuffling : No Is Question Mandatory : No Calculator : None Response Time : N.A Think Time : N.A Minimum Instruction Time : 0

Correct Marks : 5 Wrong Marks : 1

Question Key Details :

Key	Value
Comprehension	MCQ

ਵ੍ਹਰੇਭਾਞਿ A : ਭਾਰ ਨਿੱਜੀਯ ਧਾਞਿ ਰੂਧਾਰ ਕਯਕਞਾਰ ਸੂਯ ਨਾਞਿ

ਕਾਰਯ R : ਰੂਧਾ ਗੋਰੀਯ ਕੂਚਾਞਕ (bad Conductor)

1. ਯਢਿ ਭਯਯ 'A' ਯਕਾ 'R' ਕਯਯ ਯਕਾ 'R', 'A' ਕ ਯਠਿਕ ਯਧੰ ਕਾਞਕ
2. ਯਢਿ 'A' ਕਯਯ ਯਞੇ ਕਞਿ 'R' ਨਿਯਯਾ ਯਞੇ
3. ਯਢਿ 'A' ਨਿਯਯਾ ਯਞੇ ਕਞਿ 'R' ਕਯਯ ਯਞੇ
4. ਯਢਿ ਭਯਯ 'A' ਯਕਾ 'R' ਨਿਯਯਾ

Options :

485584146945. 1
485584146946. 2
485584146947. 3
485584146948. 4

Question Number : 102 Question Id : 48558436737 Question Type : MCQ Option Shuffling : No Is Question Mandatory : No Calculator : None Response Time : N.A Think Time : N.A Minimum Instruction Time : 0

Correct Marks : 5 Wrong Marks : 1

Question Key Details :

Key	Value
Comprehension	MCQ

ਦਾਅਵਾ A : ਤਾਰ ਬਣਾਉਣ ਲਈ ਚਾਂਦੀ ਦੀ ਵਰਤੋਂ ਨਹੀਂ ਕੀਤੀ ਜਾਂਦੀ ।

ਕਾਰਣ R : ਚਾਂਦੀ ਇੱਕ ਬੁਰਾ ਸੰਚਾਲਕ ਹੈ।

1. ਅਗਰ ਦੋਵੇ 'A' ਅਤੇ 'R' ਠੀਕ ਹਨ ਅਤੇ 'R' 'A' ਦੀ ਸਹੀ ਵਿਆਖਿਆ ਹੈ।
2. ਅਗਰ 'A' ਸਹੀ ਹੈ ਅਤੇ 'R' ਗਲਤ ਹੈ।
3. ਅਗਰ 'A' ਗਲਤ ਹੈ ਅਤੇ 'R' ਸਹੀ ਹੈ ।
4. ਅਗਰ ਦੋਵੇ 'A' ਅਤੇ 'R' ਗਲਤ ਹਨ।

Options :

485584146945. 1
485584146946. 2
485584146947. 3
485584146948. 4

Question Number : 102 Question Id : 48558436737 Question Type : MCQ Option Shuffling : No Is Question Mandatory : No Calculator : None Response Time : N.A Think Time : N.A Minimum Instruction Time : 0

Correct Marks : 5 Wrong Marks : 1

Question Key Details :

Key	Value
Comprehension	MCQ

உறுதிசூற்று A : வெள்ளி (சில்வர்) கம்பிகள் (வயர்கள்) தயாரிக்க பயன்படுத்தப்படுவதில்லை.

காரணம் R : வெள்ளி (சில்வர்) ஒரு சிறந்த கடத்தியல்ல.

1. 'A' and 'R' ஆகிய இரண்டும் சரி மற்றும் 'R' என்பது 'A' இன் சரியான விளக்கமாகும்
2. 'A' சரி மற்றும் 'R' தவறு
3. 'A' தவறு மற்றும் 'R' சரி
4. 'A' மற்றும் 'R' ஆகிய இரண்டும் தவறு

Options :

485584146945. 1

485584146946. 2

485584146947. 3

485584146948. 4

Question Number : 102 Question Id : 48558436737 Question Type : MCQ Option Shuffling : No Is Question Mandatory : No Calculator : None Response Time : N.A Think Time : N.A Minimum Instruction Time : 0

Correct Marks : 5 Wrong Marks : 1

Question Key Details :

Key	Value
Comprehension	MCQ

தேவீகரண A : தீగలు తయారుచేయడానికి సిల్వర్ ఉపయోగించరు

కారణం R : సిల్వర్ మంచి ప్రవాహకం కాదు.

1. 'A' మరియు 'R' రెండు నిజం మరియు 'R' అనేది 'A' కి సరైన వివరణ
2. 'A' నిజం మరియు 'R' అబద్ధం
3. 'A' అబద్ధం మరియు 'R' నిజం
4. 'A' మరియు 'R' రెండు అబద్ధం

Options :

485584146945. 1

485584146946. 2

485584146947. 3

485584146948. 4

Question Number : 102 Question Id : 48558436737 Question Type : MCQ Option Shuffling : No Is Question Mandatory : No Calculator : None Response Time : N.A Think Time : N.A Minimum Instruction Time : 0

Correct Marks : 5 Wrong Marks : 1

Question Key Details :

Key	Value
Comprehension	MCQ

بیان A: جائدی، تاریں بنائے کیئے استعمال نہیں ہوتا

وجہ R : جائدی ایک غیر ایصالی ہے

1.

دونوں A اور R درست ہیں لیکن R صحیح وضاحت ہے A کی

2.

A صحیح ہے لیکن R غلط ہے

3.

A غلط ہے لیکن R صحیح ہے

4.

دونوں A اور R غلط ہیں

Options :

485584146945. 1

485584146946. 2

485584146947. 3

485584146948. 4

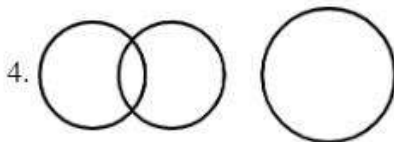
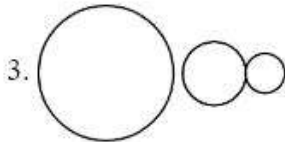
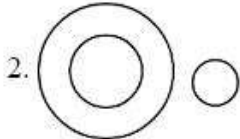
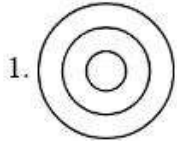
Question Number : 103 Question Id : 48558436738 Question Type : MCQ Option Shuffling : No Is Question Mandatory : No Calculator : None Response Time : N.A Think Time : N.A Minimum Instruction Time : 0

Correct Marks : 5 Wrong Marks : 1

Question Key Details :

Key	Value
Comprehension	MCQ

Which of the following represents the relationship between criminals, thieves and Judges ?



Options :

485584146949. 1

485584146950. 2

485584146951. 3

485584146952. 4

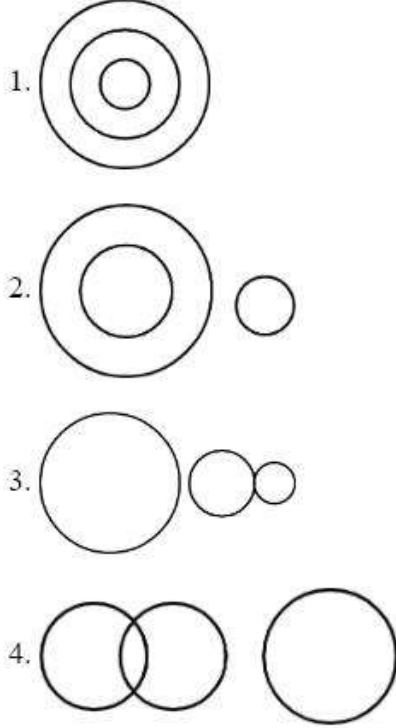
Question Number : 103 Question Id : 48558436738 Question Type : MCQ Option Shuffling : No Is Question Mandatory : No Calculator : None Response Time : N.A Think Time : N.A Minimum Instruction Time : 0

Correct Marks : 5 Wrong Marks : 1

Question Key Details :

Key	Value
Comprehension	MCQ

निम्न में से कौन सी आकृति अपराधियों, चोरों तथा न्यायाधीशों में संबंध को दर्शाती है:



Options :

485584146949. 1

485584146950. 2

485584146951. 3

485584146952. 4

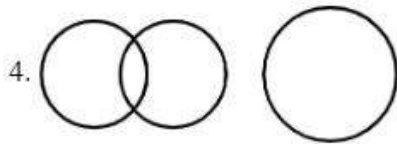
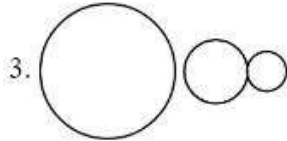
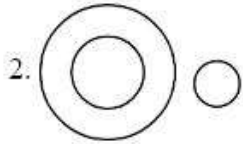
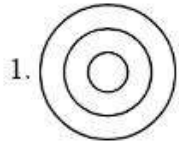
Question Number : 103 Question Id : 48558436738 Question Type : MCQ Option Shuffling : No Is Question Mandatory : No Calculator : None Response Time : N.A Think Time : N.A Minimum Instruction Time : 0

Correct Marks : 5 Wrong Marks : 1

Question Key Details :

Key	Value
Comprehension	MCQ

তলৰ কোনটো চিত্ৰই অপৰাধী, চোৰ আৰু বিচাৰকৰ মাজৰ সম্পৰ্ক দেখুৱাইছে?



Options :

485584146949. 1

485584146950. 2

485584146951. 3

485584146952. 4

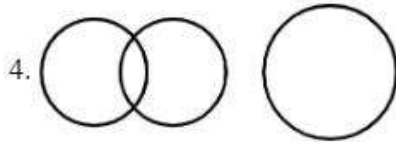
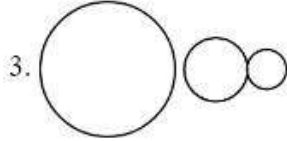
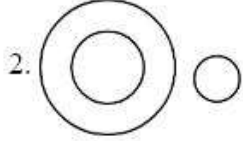
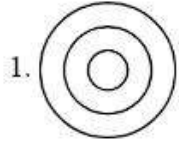
Question Number : 103 Question Id : 48558436738 Question Type : MCQ Option Shuffling : No Is Question Mandatory : No Calculator : None Response Time : N.A Think Time : N.A Minimum Instruction Time : 0

Correct Marks : 5 Wrong Marks : 1

Question Key Details :

Key	Value
Comprehension	MCQ

নীচের কোনটি অপরাধী, চোর এবং বিচারকদের মধ্যে থাকা সম্পর্কের প্রতিনিধিত্ব করে ?



Options :

485584146949. 1

485584146950. 2

485584146951. 3

485584146952. 4

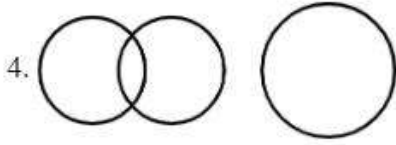
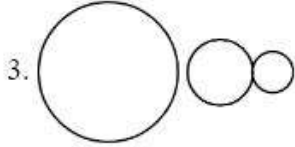
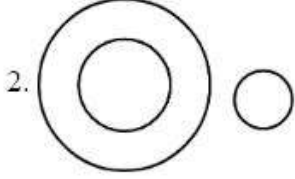
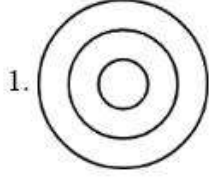
Question Number : 103 Question Id : 48558436738 Question Type : MCQ Option Shuffling : No Is Question Mandatory : No Calculator : None Response Time : N.A Think Time : N.A Minimum Instruction Time : 0

Correct Marks : 5 Wrong Marks : 1

Question Key Details :

Key	Value
Comprehension	MCQ

નીચે આપેલ વિકલ્પોમાંથી કયું એક વિકલ્પ અપરાધી, ચોર અને ન્યાયધીશ વચ્ચે સંબંધ દર્શાવે છે ?



Options :

- 485584146949. 1
- 485584146950. 2
- 485584146951. 3
- 485584146952. 4

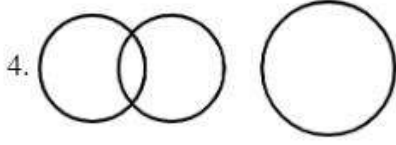
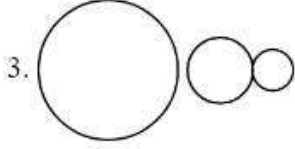
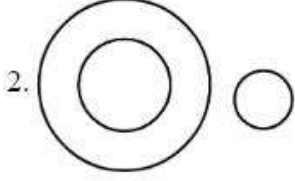

Question Number : 103 Question Id : 48558436738 Question Type : MCQ Option Shuffling : No Is Question Mandatory : No Calculator : None Response Time : N.A Think Time : N.A Minimum Instruction Time : 0

Correct Marks : 5 Wrong Marks : 1

Question Key Details :

Key	Value
Comprehension	MCQ

ಕೆಳಗಿನವುಗಳಲ್ಲಿ ಯಾವುದು ಅಪರಾಧಿಗಳು, ಕಳ್ಳರು ಮತ್ತು ನ್ಯಾಯಾಧೀಶರ ನಡುವಿನ ಸಂಬಂಧವನ್ನು ಪ್ರತಿನಿಧಿಸುತ್ತದೆ?



Options :

485584146949. 1

485584146950. 2

485584146951. 3

485584146952. 4

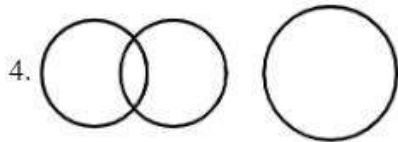
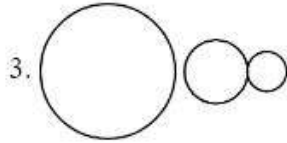
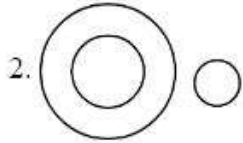
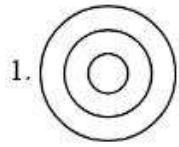
Question Number : 103 Question Id : 48558436738 Question Type : MCQ Option Shuffling : No Is Question Mandatory : No Calculator : None Response Time : N.A Think Time : N.A Minimum Instruction Time : 0

Correct Marks : 5 Wrong Marks : 1

Question Key Details :

Key	Value
Comprehension	MCQ

ചുവടെ തന്നിട്ടുള്ള ഏത് ചിത്രമാണ് ക്രിമിനലും കള്ളൻമാരും ജഡ്ജിയും തമ്മിലുള്ള ബന്ധം സൂചിപ്പിക്കുന്നതെന്ന് ?



Options :

- 485584146949. 1
- 485584146950. 2
- 485584146951. 3
- 485584146952. 4

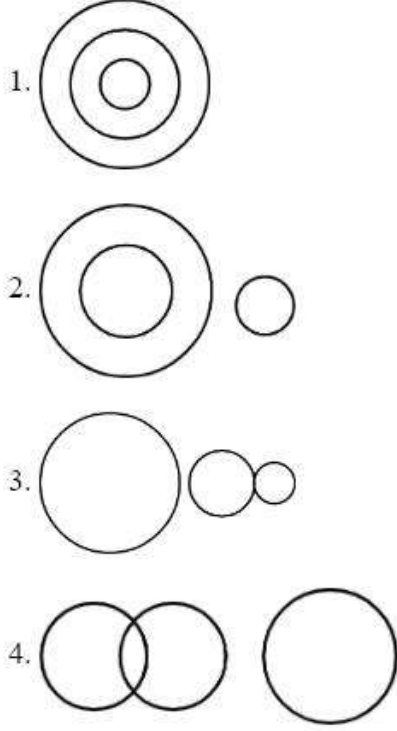
Question Number : 103 Question Id : 48558436738 Question Type : MCQ Option Shuffling : No Is Question Mandatory : No Calculator : None Response Time : N.A Think Time : N.A Minimum Instruction Time : 0

Correct Marks : 5 Wrong Marks : 1

Question Key Details :

Key	Value
Comprehension	MCQ

खालीलपैकी कोणती आकृती गुन्हेगार, चोर आणि न्यायाधीश यांच्यातील संबंध दर्शविते?



Options :

485584146949. 1

485584146950. 2

485584146951. 3

485584146952. 4

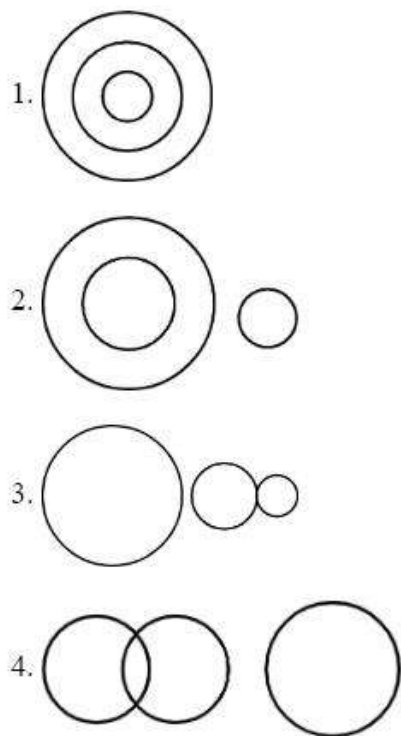
Question Number : 103 Question Id : 48558436738 Question Type : MCQ Option Shuffling : No Is Question Mandatory : No Calculator : None Response Time : N.A Think Time : N.A Minimum Instruction Time : 0

Correct Marks : 5 Wrong Marks : 1

Question Key Details :

Key	Value
Comprehension	MCQ

ନିମ୍ନବୃତ୍ତ ଚିତ୍ର ମାନଙ୍କରୁ କେଉଁଟି ଅପରାଧୀ, ଚୋର, ଏବଂ ବିଚାରପତି ମାନଙ୍କର ସମ୍ପର୍କକୁ ସୂଚିତ କରେ?



Options :

485584146949. 1

485584146950. 2

485584146951. 3

485584146952. 4

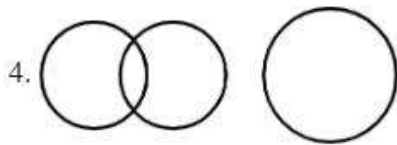
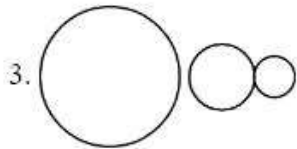
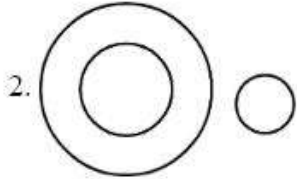
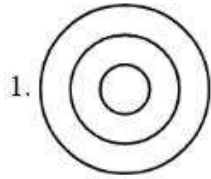
Question Number : 103 Question Id : 48558436738 Question Type : MCQ Option Shuffling : No Is Question Mandatory : No Calculator : None Response Time : N.A Think Time : N.A Minimum Instruction Time : 0

Correct Marks : 5 Wrong Marks : 1

Question Key Details :

Key	Value
Comprehension	MCQ

ਹੇਠ ਲਿਖਿਆਂ ਵਿੱਚੋਂ ਕਿਹੜਾ ਅਪਰਾਧੀਆ, ਚੇਰਾਂ ਅਤੇ ਜੱਜਾਂ ਵਿਚਕਾਰ ਸਬੰਧ ਦਰਸਾਉਂਦਾ ਹੈ?



Options :

485584146949. 1

485584146950. 2

485584146951. 3

485584146952. 4

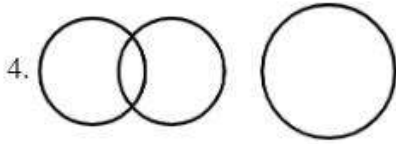
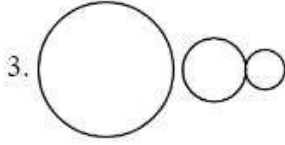
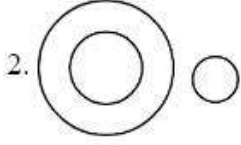

Question Number : 103 Question Id : 48558436738 Question Type : MCQ Option Shuffling : No Is Question Mandatory : No Calculator : None Response Time : N.A Think Time : N.A Minimum Instruction Time : 0

Correct Marks : 5 Wrong Marks : 1

Question Key Details :

Key	Value
Comprehension	MCQ

பின்வருபவனவற்றுள் குற்றவாளிகள், திருடர்கள் மற்றும் நீதிபதிகள் ஆகியோர்களுக்கு இடையே உள்ள தொடர்பைக் குறிப்பது எது?



Options :

- 485584146949. 1
- 485584146950. 2
- 485584146951. 3
- 485584146952. 4

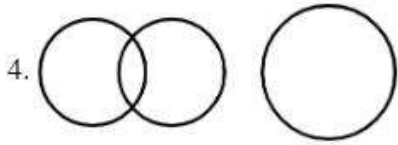
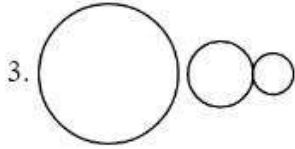
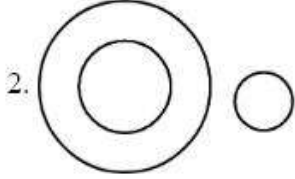
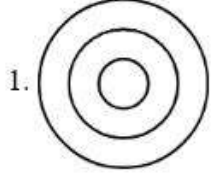
Question Number : 103 Question Id : 48558436738 Question Type : MCQ Option Shuffling : No Is Question Mandatory : No Calculator : None Response Time : N.A Think Time : N.A Minimum Instruction Time : 0

Correct Marks : 5 Wrong Marks : 1

Question Key Details :

Key	Value
Comprehension	MCQ

కింది వాటిలో ఏది నేరగాళ్లు, దొంగలు మరియు జడ్జీలు మధ్య సంబంధాన్ని సూచిస్తుంది?



Options :

485584146949. 1

485584146950. 2

485584146951. 3

485584146952. 4

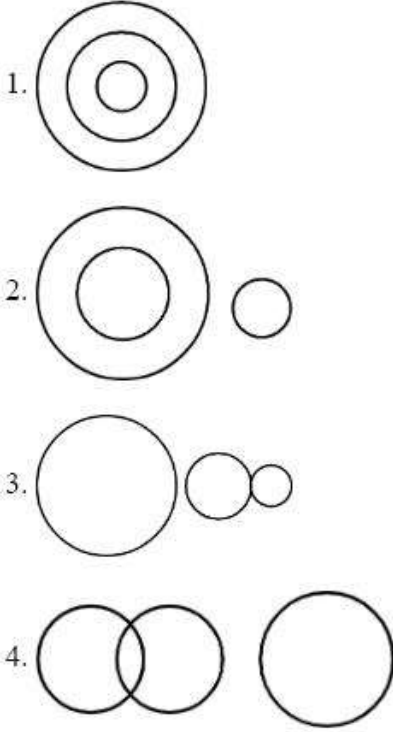
Question Number : 103 Question Id : 48558436738 Question Type : MCQ Option Shuffling : No Is Question Mandatory : No Calculator : None Response Time : N.A Think Time : N.A Minimum Instruction Time : 0

Correct Marks : 5 Wrong Marks : 1

Question Key Details :

Key	Value
Comprehension	MCQ

مندرجہ ذیل اشکال میں سے کون شکل چوروں منصفوں اور مجرموں کے تعلق کو دکھاتی ہے ؟



Options :

485584146949. 1
485584146950. 2
485584146951. 3
485584146952. 4

Question Number : 104 Question Id : 48558436739 Question Type : MCQ Option Shuffling : No Is Question Mandatory : No Calculator : None Response Time : N.A Think Time : N.A Minimum Instruction Time : 0

Correct Marks : 5 Wrong Marks : 1

Question Key Details :

Key	Value
Comprehension	MCQ

Choose the odd one out :

1. Intelligent
2. Brilliant
3. Immaculate
4. Wise

Options :

485584146953. 1
485584146954. 2
485584146955. 3
485584146956. 4

Question Number : 104 Question Id : 48558436739 Question Type : MCQ Option Shuffling : No Is Question Mandatory : No Calculator : None Response Time : N.A Think Time : N.A Minimum Instruction Time : 0

Correct Marks : 5 Wrong Marks : 1

Question Key Details :

Key	Value
Comprehension	MCQ

निम्नलिखित में से भिन्न को चुनें।

1. बुद्धिजीवी
2. प्रतिभाशाली
3. निर्मल
4. बुद्धिमान

Options :

485584146953. 1
485584146954. 2
485584146955. 3
485584146956. 4

Question Number : 104 Question Id : 48558436739 Question Type : MCQ Option Shuffling : No Is Question Mandatory : No Calculator : None Response Time : N.A Think Time : N.A Minimum Instruction Time : 0

Correct Marks : 5 Wrong Marks : 1

Question Key Details :

Key	Value
Comprehension	MCQ

নিম্নলিখিত শব্দটো চিনাক্ত করো:

1. বুদ্ধিয়ক
2. মেধাবী
3. নিষ্কলংক
4. জ্ঞানী

Options :

485584146953. 1
485584146954. 2
485584146955. 3
485584146956. 4

Question Number : 104 Question Id : 48558436739 Question Type : MCQ Option Shuffling : No Is Question Mandatory : No Calculator : None Response Time : N.A Think Time : N.A Minimum Instruction Time : 0

Correct Marks : 5 Wrong Marks : 1

Question Key Details :

Key	Value
-----	-------

বিজোড়টি বেছে নিন :

1. বুদ্ধিমান
2. উজ্জ্বল
3. নিষ্পাপ
4. জ্ঞানী

Options :

485584146953. 1
485584146954. 2
485584146955. 3
485584146956. 4

Question Number : 104 Question Id : 48558436739 Question Type : MCQ Option Shuffling : No Is Question Mandatory : No Calculator : None Response Time : N.A Think Time : N.A Minimum Instruction Time : 0

Correct Marks : 5 Wrong Marks : 1

Question Key Details :

Key	Value
Comprehension	MCQ

নীচেরাথী অর্থাৎ পরাঁও কুরী .

1. অর্থাৎকুরী
2. পরাঁওকুরী
3. নির্মাণ
4. অর্থাৎমাণ

Options :

485584146953. 1
485584146954. 2
485584146955. 3
485584146956. 4

Question Number : 104 Question Id : 48558436739 Question Type : MCQ Option Shuffling : No Is Question Mandatory : No Calculator : None Response Time : N.A Think Time : N.A Minimum Instruction Time : 0

Correct Marks : 5 Wrong Marks : 1

Question Key Details :

Key	Value
Comprehension	MCQ

ಗುಂಪಿಗೆ ಸೇರದ್ದನ್ನು ಆರಿಸಿ

1. ಬುದ್ಧಿವಂತ
2. ಪ್ರತಿಭಾವಂತ
3. ಪರಿಶುದ್ಧ
4. ಜಾಣ

Options :

485584146953. 1
485584146954. 2
485584146955. 3
485584146956. 4

Question Number : 104 Question Id : 48558436739 Question Type : MCQ Option Shuffling : No Is Question Mandatory : No Calculator : None Response Time : N.A Think Time : N.A Minimum Instruction Time : 0

Correct Marks : 5 Wrong Marks : 1

Question Key Details :

Key	Value
Comprehension	MCQ

ಕುದ್ರದಲ್ಲಿ ಚೇರಾಣ್ಣಾತ್ ಏಱ್ ?

1. ಣುಱಿಯುಱುಱು
2. ಢಿಱುಱುಱು
3. ಕುಱುಱುಱು
4. ಱುಱುಱುಱು

Options :

485584146953. 1
485584146954. 2
485584146955. 3
485584146956. 4

Question Number : 104 Question Id : 48558436739 Question Type : MCQ Option Shuffling : No Is Question Mandatory : No Calculator : None Response Time : N.A Think Time : N.A Minimum Instruction Time : 0

Correct Marks : 5 Wrong Marks : 1

Question Key Details :

Key	Value
Comprehension	MCQ

गटात न बसणारा घटक ओळखा.

1. बुद्धिमान
2. खूप हुशार
3. परिपूर्ण
4. शहाणा

Options :

485584146953. 1
485584146954. 2
485584146955. 3
485584146956. 4

Question Number : 104 Question Id : 48558436739 Question Type : MCQ Option Shuffling : No Is Question Mandatory : No Calculator : None Response Time : N.A Think Time : N.A Minimum Instruction Time : 0

Correct Marks : 5 Wrong Marks : 1

Question Key Details :

Key	Value
Comprehension	MCQ

ଅସଙ୍ଗତଟିକୁ ବାଛନ୍ତୁ:

1. ବୁଦ୍ଧିମାନ
2. ଦୀପ୍ତିମାନ
3. ତୁଚ୍ଛମାନ
4. ବିଜ୍ଞ

Options :

485584146953. 1
485584146954. 2
485584146955. 3
485584146956. 4

Question Number : 104 Question Id : 48558436739 Question Type : MCQ Option Shuffling : No Is Question Mandatory : No Calculator : None Response Time : N.A Think Time : N.A Minimum Instruction Time : 0

Correct Marks : 5 Wrong Marks : 1

Question Key Details :

Key	Value
Comprehension	MCQ

ਹੇਠ ਲਿਖਿਆਂ ਵਿੱਚੋਂ ਵੱਖਰਾ ਲੱਭੋ?

1. ਬੁੱਧੀ ਮਾਨ
2. ਪ੍ਰਤਿਭਾਸ਼ਾਲੀ
3. ਨਿਰਮਲ
4. ਅਕਲਮੰਦ

Options :

485584146953. 1
485584146954. 2
485584146955. 3
485584146956. 4

Question Number : 104 Question Id : 48558436739 Question Type : MCQ Option Shuffling : No Is Question Mandatory : No Calculator : None Response Time : N.A Think Time : N.A Minimum Instruction Time : 0

Correct Marks : 5 Wrong Marks : 1

Question Key Details :

Key	Value
Comprehension	MCQ

ਪொருந்தாத ஒன்றைத் தேர்ந்தெடுக்கவும்:

1. Intelligent
2. Brilliant
3. Immaculate
4. Wise

Options :

485584146953. 1
485584146954. 2
485584146955. 3
485584146956. 4

Question Number : 104 Question Id : 48558436739 Question Type : MCQ Option Shuffling : No Is Question Mandatory : No Calculator : None Response Time : N.A Think Time : N.A Minimum Instruction Time : 0

Correct Marks : 5 Wrong Marks : 1

Question Key Details :

Key	Value
Comprehension	MCQ

భిన్నమైన దానిని గుర్తించండి :

1. Intelligent
2. Brilliant
3. Immaculate
4. Wise

Options :

485584146953. 1
485584146954. 2
485584146955. 3
485584146956. 4

Question Number : 104 Question Id : 48558436739 Question Type : MCQ Option Shuffling : No Is Question Mandatory : No Calculator : None Response Time : N.A Think Time : N.A Minimum Instruction Time : 0

Correct Marks : 5 Wrong Marks : 1

Question Key Details :

Key	Value
Comprehension	MCQ

مندرجہ ذیل میں سے جو مختلف ہے اس کو الگ کریں :

1. ذہین
2. منور
3. بے عیب
4. دانشمند

Options :

485584146953. 1
485584146954. 2
485584146955. 3
485584146956. 4

Question Number : 105 Question Id : 48558436740 Question Type : MCQ Option Shuffling : No Is Question Mandatory : No Calculator : None Response Time : N.A Think Time : N.A Minimum Instruction Time : 0

Correct Marks : 5 Wrong Marks : 1

Question Key Details :

Key	Value
Comprehension	MCQ

The position of how many digits in the number 315468792 will remain unchanged after the digits are rearranged in the ascending order within the number

1. Zero
2. One
3. Two
4. Three

Options :

485584146957. 1
485584146958. 2
485584146959. 3
485584146960. 4

Question Number : 105 Question Id : 48558436740 Question Type : MCQ Option Shuffling : No Is Question Mandatory : No Calculator : None Response Time : N.A Think Time : N.A Minimum Instruction Time : 0

Correct Marks : 5 Wrong Marks : 1

Question Key Details :

Key	Value
Comprehension	MCQ

संख्या 315468792 के अंकों को आरोही क्रम में लगाने से कितने अंको की स्थिति नहीं बदलेगी:

1. शून्य
2. एक
3. दो
4. तीन

Options :

485584146957. 1
485584146958. 2
485584146959. 3
485584146960. 4

Question Number : 105 Question Id : 48558436740 Question Type : MCQ Option Shuffling : No Is Question Mandatory : No Calculator : None Response Time : N.A Think Time : N.A Minimum Instruction Time : 0

Correct Marks : 5 Wrong Marks : 1

Question Key Details :

Key	Value
Comprehension	MCQ

315468792 সংখ্যাটোৰ কেইটা অংকৰ স্থান একেই থাকিব যদি সেই সংখ্যাটোতে আমি অংককেইটা উৰ্দ্ধক্রমত পুনৰ সজাই লওঁ।

1. শূন্য
2. এক
3. দুই
4. তিনি

Options :

485584146957. 1
485584146958. 2
485584146959. 3
485584146960. 4

Question Number : 105 Question Id : 48558436740 Question Type : MCQ Option Shuffling : No Is Question Mandatory : No Calculator : None Response Time : N.A Think Time : N.A Minimum Instruction Time : 0

Correct Marks : 5 Wrong Marks : 1

Question Key Details :

Key	Value
Comprehension	MCQ

315468792 নম্বৰে কতগুলি সংখ্যাৰ অবস্থান অপৰিবৰ্তিত থাকবে যদি নম্বৰেৰ মध्ये থাকা সংখ্যাগুলি পুনৰায় উৰ্দ্ধমুখী ক্রমে সাজানো হয়ঃ

1. শূন্য
2. এক
3. দুই
4. তিন

Options :

485584146957. 1
485584146958. 2
485584146959. 3
485584146960. 4

Question Number : 105 Question Id : 48558436740 Question Type : MCQ Option Shuffling : No Is Question Mandatory : No Calculator : None Response Time : N.A Think Time : N.A Minimum Instruction Time : 0

Correct Marks : 5 Wrong Marks : 1

Question Key Details :

Key	Value
Comprehension	MCQ

સંખ્યાની અંદર ચડતા ક્રમમાં અંકોને ફરીથી ગોઠવ્યા પછી 315468792 નંબરમાં કેટલા અંકો છે તેની સ્થિતી યથાવત રહેશે ?

1. શૂન્ય
2. એક
3. બે
4. ત્રણ

Options :

485584146957. 1
485584146958. 2
485584146959. 3
485584146960. 4

Question Number : 105 Question Id : 48558436740 Question Type : MCQ Option Shuffling : No Is Question Mandatory : No Calculator : None Response Time : N.A Think Time : N.A Minimum Instruction Time : 0

Correct Marks : 5 Wrong Marks : 1

Question Key Details :

Key	Value
Comprehension	MCQ

સંખ્યા 315468792 રಲ್ಲಿ, એક અંકોનું સ્થાનવું સંખ્યાઓએ અંકોનું બરિકે ક્રમદલ્લિ, પુનરા જોડેસલદ નંતરવુઠ હાગેયે ઉલેયુત્તદ?

1. સોને
2. ઁદુ
3. ઁરડુ
4. મુઠુ

Options :

485584146957. 1
485584146958. 2
485584146959. 3
485584146960. 4

Question Number : 105 Question Id : 48558436740 Question Type : MCQ Option Shuffling : No Is Question Mandatory : No Calculator : None Response Time : N.A Think Time : N.A Minimum Instruction Time : 0

Correct Marks : 5 Wrong Marks : 1

Question Key Details :

Key	Value
Comprehension	MCQ

315468792 ഈ സംഖ്യയിലെ അക്കങ്ങളെ ആരോഹണ ക്രമത്തിൽ എഴുതിയാൽ, എത്ര അക്കങ്ങൾ ഇപ്പോഴുള്ള അതേ സ്ഥാനത്ത് നിൽക്കും ?

1. 0
2. 1
3. 2
4. 3

Options :

- 485584146957. 1
- 485584146958. 2
- 485584146959. 3
- 485584146960. 4

Question Number : 105 Question Id : 48558436740 Question Type : MCQ Option Shuffling : No Is Question Mandatory : No Calculator : None Response Time : N.A Think Time : N.A Minimum Instruction Time : 0

Correct Marks : 5 Wrong Marks : 1

Question Key Details :

Key	Value
Comprehension	MCQ

315468792 ही संख्या चढत्या क्रमाने पुनर्रचित केल्यास त्या संख्येतील किती अंकांचे स्थान बदलणार नाही?

1. शून्य
2. एक
3. दोन
4. तीन

Options :

- 485584146957. 1
- 485584146958. 2
- 485584146959. 3
- 485584146960. 4

Question Number : 105 Question Id : 48558436740 Question Type : MCQ Option Shuffling : No Is Question Mandatory : No Calculator : None Response Time : N.A Think Time : N.A Minimum Instruction Time : 0

Correct Marks : 5 Wrong Marks : 1

Question Key Details :

Key	Value
Comprehension	MCQ

315468792 ਸੰਖਿਆਚਿੰਨ੍ਹ ਯਦਿ ਕੁਮਾਰੀ ਕੁਮਾਰੇ ਪੂਰੀ ਸਜਾਓ ਵਿਆਖਿਆ ਤਾਹਾਹੇਲੇ ਕੇਠੋਚਿ ਫਿਰਿ (ਅਕ) ਕ ਸ਼ਾਨ ਪਰਿਵਰਤਨ ਹੋਵ ਨਾਹਿ?

1. ਗੁੰਘਾ
2. ਖੜ
3. ਫੁਲ
4. ਚਿਨ੍ਹ

Options :

485584146957. 1
485584146958. 2
485584146959. 3
485584146960. 4

Question Number : 105 Question Id : 48558436740 Question Type : MCQ Option Shuffling : No Is Question Mandatory : No Calculator : None Response Time : N.A Think Time : N.A Minimum Instruction Time : 0

Correct Marks : 5 Wrong Marks : 1

Question Key Details :

Key	Value
Comprehension	MCQ

ਨੰਬਰ 315468792 ਵਿੱਚ ਕਿੰਨੇ ਨੰਬਰਾਂ ਦੇ ਸਥਾਨ ਵਿੱਚ ਕੋਈ ਬਦਲਾਵ ਨਹੀਂ ਆਵੇਗਾ, ਜਦੋਂ ਇਨ੍ਹਾਂ ਨੂੰ ਵੱਧਦੇ ਕ੍ਰਮ ਵਿੱਚ ਮੁੜ ਵਿਵਸਥਿਤ ਕੀਤਾ ਜਾਵੇਗਾ?

1. ਜ਼ੀਰੋ
2. ਇੱਕ
3. ਦੋ
4. ਤਿੰਨ

Options :

485584146957. 1
485584146958. 2
485584146959. 3
485584146960. 4

Question Number : 105 Question Id : 48558436740 Question Type : MCQ Option Shuffling : No Is Question Mandatory : No Calculator : None Response Time : N.A Think Time : N.A Minimum Instruction Time : 0

Correct Marks : 5 Wrong Marks : 1

Question Key Details :

Key	Value
Comprehension	MCQ

கொடுக்கப்பட்ட 315468792 என்ற எண்ணில் உள்ள அதன் இலக்கங்களை ஏறு வரிசையில் மாற்றியமைத்தால் எத்தனை இலக்கங்கள் அதன் நிலை மாறாமல் இருக்கும்?

1. பூஜ்ஜியம்
2. ஒன்று
3. இரண்டு
4. மூன்று

Options :

485584146957. 1
485584146958. 2
485584146959. 3
485584146960. 4

Question Number : 105 Question Id : 48558436740 Question Type : MCQ Option Shuffling : No Is Question Mandatory : No Calculator : None Response Time : N.A Think Time : N.A Minimum Instruction Time : 0

Correct Marks : 5 Wrong Marks : 1

Question Key Details :

Key	Value
Comprehension	MCQ

సంఖ్య లో ఆరోహణ క్రమంలో అంకెలు తిరిగి అమర్చబడిన తర్వాత సంఖ్య 315468792 లో ఎన్ని అంకెలు స్థానం మారకుండా ఉంటాయి.

1. సున్న
2. ఒకటి
3. రెండు
4. మూడు

Options :

485584146957. 1
485584146958. 2
485584146959. 3
485584146960. 4

Question Number : 105 Question Id : 48558436740 Question Type : MCQ Option Shuffling : No Is Question Mandatory : No Calculator : None Response Time : N.A Think Time : N.A Minimum Instruction Time : 0

Correct Marks : 5 Wrong Marks : 1

Question Key Details :

Key	Value
Comprehension	MCQ

اس نمبر 315468792 میں کتنے بندسوں کی جگہ وہی رہے گی اگر ان کو دوبارہ چھوٹے سے بڑے بندسوں والی ترتیب میں لکھا جائے ؟

1. صفر
2. ایک
3. دو
4. تین

Options :

485584146957. 1
485584146958. 2
485584146959. 3
485584146960. 4

Question Number : 106 Question Id : 48558436741 Question Type : MCQ Option Shuffling : No Is Question Mandatory : No Calculator : None Response Time : N.A Think Time : N.A Minimum Instruction Time : 0

Correct Marks : 5 Wrong Marks : 1

Question Key Details :

Key	Value
Comprehension	MCQ

The position of the first and the sixth digits in the number 7398604215 are interchanged. Similarly the second and the seventh digits are interchanged and so on. Which of the following will be the fifth from the right end after the re-arrangement ?

1. 3
2. 5
3. 7
4. 1

Options :

485584146961. 1
485584146962. 2
485584146963. 3
485584146964. 4

Question Number : 106 Question Id : 48558436741 Question Type : MCQ Option Shuffling : No Is Question Mandatory : No Calculator : None Response Time : N.A Think Time : N.A Minimum Instruction Time : 0

Correct Marks : 5 Wrong Marks : 1

Question Key Details :

Key	Value
Comprehension	MCQ

संख्या 7398604215 में प्रथम तथा छठे अंक का स्थान आपस में बदल दिया जाता है। इसी प्रकार, दूसरे तथा सातवें अंक का स्थान आपस में बदल दिया जाता है और इसी तरह आगे भी अंकों के साथ किया जाता है। पुनर्व्यवस्था के बाद, दाईं तरफ से पाँचवाँ अंक कौन सा होगा:

1. 3

2. 5

3. 7

4. 1

Options :

485584146961. 1

485584146962. 2

485584146963. 3

485584146964. 4

Question Number : 106 Question Id : 48558436741 Question Type : MCQ Option Shuffling : No Is Question Mandatory : No Calculator : None Response Time : N.A Think Time : N.A Minimum Instruction Time : 0

Correct Marks : 5 Wrong Marks : 1

Question Key Details :

Key	Value
Comprehension	MCQ

7398604215 সংখ্যাটোৰ প্ৰথম আৰু ষষ্ঠ স্থানৰ অংকদুটাৰ স্থান পৰস্পৰ সালসলনি কৰা হ'ল। একেই ধৰণে দ্বিতীয় আৰু সপ্তম স্থানৰ অংকদুটাৰো স্থান সালসলনি কৰা হ'ল আৰু একেই ধৰণে বাকী থকা অংকসমূহৰ স্থান সলনি কৰা হ'ল। সমস্ত সালসলনিৰ পিছত তলৰ কোনটো অঙ্ক সোঁফালৰ পৰা পঞ্চম স্থানত থাকিব?

1. 3

2. 5

3. 7

4. 1

Options :

485584146961. 1

485584146962. 2

485584146963. 3

485584146964. 4

Question Number : 106 Question Id : 48558436741 Question Type : MCQ Option Shuffling : No Is Question Mandatory : No Calculator : None Response Time : N.A Think Time : N.A Minimum Instruction Time : 0

Correct Marks : 5 Wrong Marks : 1

Question Key Details :

Key	Value
Comprehension	MCQ

7398604215 નંબરે પ્રથમ અવસ્થાન એવં છય અક્ષર સ્થાનેર માન પરસ્પર પરિવર્તન કરા હય। એઈ ઢાવે દ્વિતીય એવં સપ્તમ અક્ષર સ્થાનેર માન પરસ્પર પરિવર્તન કરા હય એવં આરઁ ચલતે થાકવે। નીચરે કોનટિ પુનારાય સાજાનોર પર ઢાનદિક થેકે પશ્ચમ હવે ?

1. 3

2. 5

3. 7

4. 1

Options :

485584146961. 1

485584146962. 2

485584146963. 3

485584146964. 4

Question Number : 106 Question Id : 48558436741 Question Type : MCQ Option Shuffling : No Is Question Mandatory : No Calculator : None Response Time : N.A Think Time : N.A Minimum Instruction Time : 0

Correct Marks : 5 Wrong Marks : 1

Question Key Details :

Key	Value
Comprehension	MCQ

નંબર 7398604215 માં પ્રથમ અને છ અંકના સ્થાન મૂલ્યની સ્થિતિ બદલાઈ ગઈ છે, તેવી જ રીતે બીજા અને સાતમાં અંકના સ્થાનની ક્રિમતો એકબીજા સાથે બદલાય છે અને તેથી વધુ પણ પુનઃ વ્યવસ્થા પછી નીચેનામાંથી કયો જમણી બાજુથી પાંચમો હશે ?

1. 3

2. 5

3. 7

4. 1

Options :

485584146961. 1

485584146962. 2

485584146963. 3

485584146964. 4

Question Number : 106 Question Id : 48558436741 Question Type : MCQ Option Shuffling : No Is Question Mandatory : No Calculator : None Response Time : N.A Think Time : N.A Minimum Instruction Time : 0

Correct Marks : 5 Wrong Marks : 1

Question Key Details :

Key	Value
Comprehension	MCQ

ಸಂಖ್ಯೆ 7398604215 ರಲ್ಲಿ ಮೊದಲನೇ ಮತ್ತು ಆರನೇ ಅಂಕಗಳ ಸ್ಥಾನದ ಮೌಲ್ಯವನ್ನು ಅದಲು ಬದಲಿಸಲಾಗಿದೆ. ಅದೇ ರೀತಿ ಎರಡನೇ ಮತ್ತು ಏಳನೇ ಅಂಕಗಳ ಸ್ಥಾನಮೌಲ್ಯವನ್ನು ಅದಲು ಬದಲಿಸಲಾಗಿದೆ ಮತ್ತು ಹೀಗೆ ಮುಂದುವರಿಯುತ್ತದೆ. ಈ ಕೆಳಗಿನವುಗಳಲ್ಲಿ ಯಾವುದು ಪುನರ್ ಜೋಡಣೆ ನಂತರ ಬಲಭಾಗದಿಂದ ಐದನೇ ಸ್ಥಾನದಲ್ಲಿರುತ್ತದೆ?

1. 3
2. 5
3. 7
4. 1

Options :

- 485584146961. 1
- 485584146962. 2
- 485584146963. 3
- 485584146964. 4

Question Number : 106 Question Id : 48558436741 Question Type : MCQ Option Shuffling : No Is Question Mandatory : No Calculator : None Response Time : N.A Think Time : N.A Minimum Instruction Time : 0

Correct Marks : 5 Wrong Marks : 1

Question Key Details :

Key	Value
Comprehension	MCQ

7398604215 എന്ന സംಖ್ಯೆಯಲ್ಲಿ ಒಂದನೇ ಮತ್ತು ಆರನೇ ಅಂಕಗಳ ಸ್ಥಾನದ ಮೌಲ್ಯವನ್ನು ಅದಲು ಬದಲಿಸಲಾಗಿದೆ. ಅದೇ ರೀತಿ ಎರಡನೇ ಮತ್ತು ಏಳನೇ ಅಂಕಗಳ ಸ್ಥಾನಮೌಲ್ಯವನ್ನು ಅದಲು ಬದಲಿಸಲಾಗಿದೆ ಮತ್ತು ಹೀಗೆ ಮುಂದುವರಿಯುತ್ತದೆ. ಈ ಕೆಳಗಿನವುಗಳಲ್ಲಿ ಯಾವುದು ಪುನರ್ ಜೋಡಣೆ ನಂತರ ಬಲಭಾಗದಿಂದ ಐದನೇ ಸ್ಥಾನದಲ್ಲಿರುತ್ತದೆ?

1. 3
2. 5
3. 7
4. 1

Options :

- 485584146961. 1
- 485584146962. 2
- 485584146963. 3
- 485584146964. 4

Question Number : 106 Question Id : 48558436741 Question Type : MCQ Option Shuffling : No Is Question Mandatory : No Calculator : None Response Time : N.A Think Time : N.A Minimum Instruction Time : 0

Correct Marks : 5 Wrong Marks : 1

Question Key Details :

Key	Value
-----	-------

7398604215 या संख्येतील पहिल्या व सहाव्या अंकाच्या स्थानमूल्यात अदलाबदल केली आहे. त्याचप्रमाणे दुसऱ्या व सातव्या अंकाच्या स्थानमूल्यातही अदलाबदल आहे. उजवीकडून संख्यामालेची पुनर्रचना केली असता खालीलपैकी कोणती संख्या पाचव्या स्थानावर येईल?

1. 3

2. 5

3. 7

4. 1

Options :

485584146961. 1

485584146962. 2

485584146963. 3

485584146964. 4

Question Number : 106 Question Id : 48558436741 Question Type : MCQ Option Shuffling : No Is Question Mandatory : No Calculator : None Response Time : N.A Think Time : N.A Minimum Instruction Time : 0

Correct Marks : 5 Wrong Marks : 1

Question Key Details :

Key	Value
Comprehension	MCQ

7398604215 संख्यातिले प्रथम व सहाव्या स्थानात अदलाबदल केली आहे. त्याचप्रमाणे दुसऱ्या व सातव्या स्थानातही अदलाबदल केली आहे. उजवीकडून संख्यामालेची पुनर्रचना केली असता खालीलपैकी कोणती संख्या पाचव्या स्थानावर येईल?

1. 3

2. 5

3. 7

4. 1

Options :

485584146961. 1

485584146962. 2

485584146963. 3

485584146964. 4

Question Number : 106 Question Id : 48558436741 Question Type : MCQ Option Shuffling : No Is Question Mandatory : No Calculator : None Response Time : N.A Think Time : N.A Minimum Instruction Time : 0

Correct Marks : 5 Wrong Marks : 1

Question Key Details :

Key	Value
Comprehension	MCQ

ਨੰਬਰ 7398604215 ਵਿੱਚ ਪਹਿਲੇ ਦੀ ਸਥਿਤੀ ਤੇ ਛੇ ਅੰਕਾਂ ਦੇ ਸਥਾਨ ਮੁੱਲ ਦੀ ਸਥਿਤੀ ਆਪਸ ਵਿੱਚ ਬਦਲ ਗਈ ਇਸੇ ਤਰ੍ਹਾਂ ਦੂਜੇ ਤੇ ਸਤਵੇਂ ਅੰਕ ਕੇ ਸਥਾਨ ਮੁੱਲ ਵੀ ਆਪਸ ਵਿੱਚ ਬਦਲ ਗਏ ਹਨ ਅਤੇ ਇਸ ਤਰ੍ਹਾਂ ਹੋਰ ਵੀ ਪੁਨਰ ਵਿਵਸਥਾ ਦੇ ਬਾਰ ਹੇਠਾਂ ਦਿੱਤੇ ਵਿੱਚੋਂ ਕਿਹੜਾ ਸੱਜੇ ਤੋਂ 5 ਵਾਂ ਹੋਵੇਗਾ?

1. 3

2. 5

3. 7

4. 1

Options :

485584146961. 1

485584146962. 2

485584146963. 3

485584146964. 4

Question Number : 106 Question Id : 48558436741 Question Type : MCQ Option Shuffling : No Is Question Mandatory : No Calculator : None Response Time : N.A Think Time : N.A Minimum Instruction Time : 0

Correct Marks : 5 Wrong Marks : 1

Question Key Details :

Key	Value
Comprehension	MCQ

7398604215 ਏਨ੍ਹਰ ਏਨ੍ਹੇਨੀਲ ਮੁਠਲ ਮਹ੍ਹ੍ਰੁਮ ਆਹਰਾਵਠੁ ਓੁਠਠੀਲ ਁਲਲ ਓਲਕਕਠਗਲੀਨ ਓੁ ਠਠੀਪੁ ਓਨ੍ਹੁਕਕੋਕਾਨ੍ਹੁ ਮਾਹ੍ਹਰਪਪਠੁਕੀਹਠੁ. ਅਠੇਠਪੋਲ ਓਰਨ੍ਹਡਾਵਠੁ ਮਹ੍ਹ੍ਰੁਮ ਏਮੁਰਾਵਠੁ ਓੁਠਠੀਲ ਁਲਲ ਓਲਕਕਠਗਲੀਨ ਓੁ ਠਠੀਪੁ ਮਾਹ੍ਹਰਪਪਠੁਕੀਹਠੁ. ਓਵਵਾਹੁ ਮਾਹ੍ਹ੍ਰੀਠਮਕਕਪਪਡ ਪੀਹਕੁ, ਵਲਠੁ ਪਕਕਠੀਲ ਓਰੁਨ੍ਹੁ ਓਨ੍ਹਠਾਵਠਾਕ ਅਮੇਮਨ੍ਹੁਲਲ ਏਨ੍ਹ ਏਠੁ?

1. 3

2. 5

3. 7

4. 1

Options :

485584146961. 1

485584146962. 2

485584146963. 3

485584146964. 4

Question Number : 106 Question Id : 48558436741 Question Type : MCQ Option Shuffling : No Is Question Mandatory : No Calculator : None Response Time : N.A Think Time : N.A Minimum Instruction Time : 0

Correct Marks : 5 Wrong Marks : 1

Question Key Details :

Key	Value
Comprehension	MCQ

7398604215 సంఖ్యలో మొదటి మరియు ఆరవ అంకె స్థాన విలువలు మార్చబడ్డాయి. అదే విధంగా రెండవ మరియు ఏడవ అంకె స్థాన విలువలు మార్చబడ్డాయి. ఈ క్రింది వాటిలో మార్చబడిన తర్వాత కుడివైపు నుండి ఐదవది?

1. 3

2. 5

3. 7

4. 1

Options :

485584146961. 1

485584146962. 2

485584146963. 3

485584146964. 4

Question Number : 106 Question Id : 48558436741 Question Type : MCQ Option Shuffling : No Is Question Mandatory : No Calculator : None Response Time : N.A Think Time : N.A Minimum Instruction Time : 0

Correct Marks : 5 Wrong Marks : 1

Question Key Details :

Key	Value
Comprehension	MCQ

اس نمبر 7398604215 میں پہلے اور چھٹے نمبر کے ہندسوں کی جگہ آپس میں تبدیل کی گئی ہے۔ اسی طرح دوسرے اور ساتویں نمبر کے ہندسوں کو آپس میں بدلا گیا ہے اور اسی طرح آگے بھی۔ دوبارہ ترتیب کے بعد مندرجہ ذیل میں کون سا ہندسہ دائیں طرف سے پانچویں نمبر پر ہوگا ؟

1. 3

2. 5

3. 7

4. 1

Options :

485584146961. 1

485584146962. 2

485584146963. 3

485584146964. 4

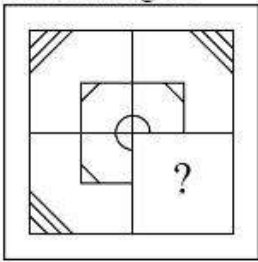
Question Number : 107 Question Id : 48558436742 Question Type : MCQ Option Shuffling : No Is Question Mandatory : No Calculator : None Response Time : N.A Think Time : N.A Minimum Instruction Time : 0

Correct Marks : 5 Wrong Marks : 1

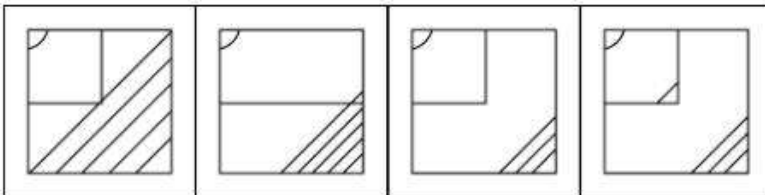
Question Key Details :

Key	Value
Comprehension	MCQ

Problem Figure



Answer Figure



(a)

(b)

(c)

(d)

1. a

2. b

3. c

4. d

Options :

485584146965. 1

485584146966. 2

485584146967. 3

485584146968. 4

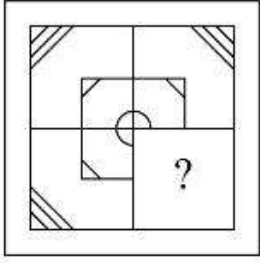
Question Number : 107 Question Id : 48558436742 Question Type : MCQ Option Shuffling : No Is Question Mandatory : No Calculator : None Response Time : N.A Think Time : N.A Minimum Instruction Time : 0

Correct Marks : 5 Wrong Marks : 1

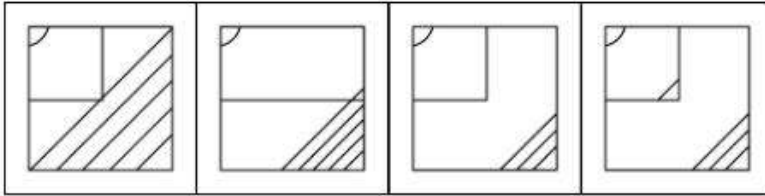
Question Key Details :

Key	Value
Comprehension	MCQ

समस्या चित्र



उत्तर वाले चित्र



(a)

(b)

(c)

(d)

1. a

2. b

3. c

4. d

Options :

485584146965. 1

485584146966. 2

485584146967. 3

485584146968. 4

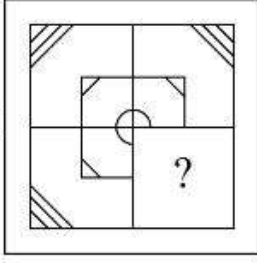
Question Number : 107 Question Id : 48558436742 Question Type : MCQ Option Shuffling : No Is Question Mandatory : No Calculator : None Response Time : N.A Think Time : N.A Minimum Instruction Time : 0

Correct Marks : 5 Wrong Marks : 1

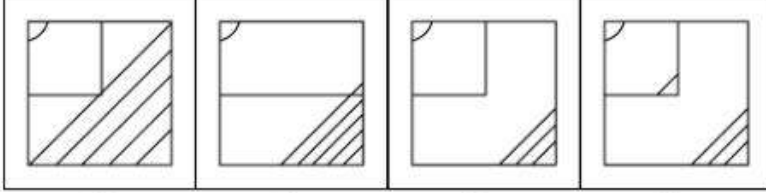
Question Key Details :

Key	Value
Comprehension	MCQ

প্রশ্ন চিত্র



শুদ্ধ উত্তর চিত্রটো কি হ'ব?



(a)

(b)

(c)

(d)

1. a

2. b

3. c

4. d

Options :

485584146965. 1

485584146966. 2

485584146967. 3

485584146968. 4

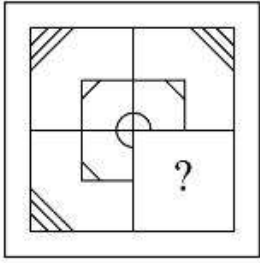
Question Number : 107 Question Id : 48558436742 Question Type : MCQ Option Shuffling : No Is Question Mandatory : No Calculator : None Response Time : N.A Think Time : N.A Minimum Instruction Time : 0

Correct Marks : 5 Wrong Marks : 1

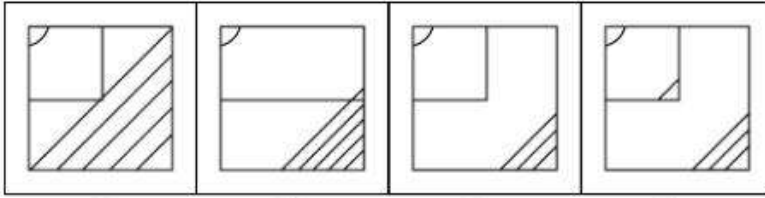
Question Key Details :

Key	Value
Comprehension	MCQ

সমস্যা চিত্র



উত্তর চিত্র



(a)

(b)

(c)

(d)

1. a

2. b

3. c

4. d

Options :

485584146965. 1

485584146966. 2

485584146967. 3

485584146968. 4

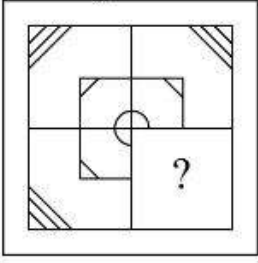
Question Number : 107 Question Id : 48558436742 Question Type : MCQ Option Shuffling : No Is Question Mandatory : No Calculator : None Response Time : N.A Think Time : N.A Minimum Instruction Time : 0

Correct Marks : 5 Wrong Marks : 1

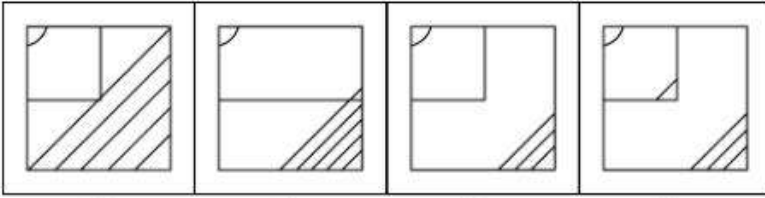
Question Key Details :

Key	Value
Comprehension	MCQ

પ્રશ્ન આકૃતિ



જવાબ આકૃતિ



(a)

(b)

(c)

(d)

1. a

2. b

3. c

4. d

Options :

485584146965. 1

485584146966. 2

485584146967. 3

485584146968. 4

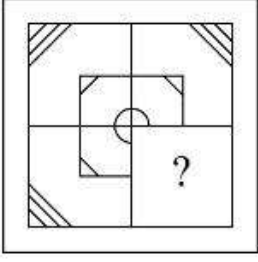
Question Number : 107 Question Id : 48558436742 Question Type : MCQ Option Shuffling : No Is Question Mandatory : No Calculator : None Response Time : N.A Think Time : N.A Minimum Instruction Time : 0

Correct Marks : 5 Wrong Marks : 1

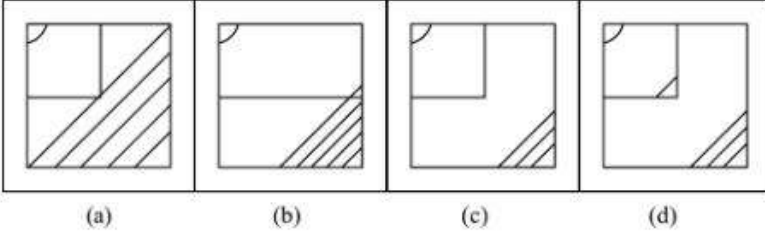
Question Key Details :

Key	Value
Comprehension	MCQ

ಸಮಸ್ಯೆ ಚಿತ್ರ:



ಉತ್ತರ ಚಿತ್ರ:



1. a

2. b

3. c

4. d

Options :

485584146965. 1

485584146966. 2

485584146967. 3

485584146968. 4

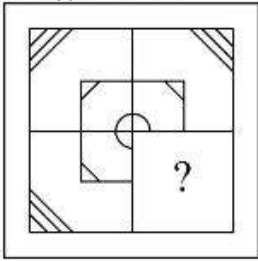
Question Number : 107 Question Id : 48558436742 Question Type : MCQ Option Shuffling : No Is Question Mandatory : No Calculator : None Response Time : N.A Think Time : N.A Minimum Instruction Time : 0

Correct Marks : 5 Wrong Marks : 1

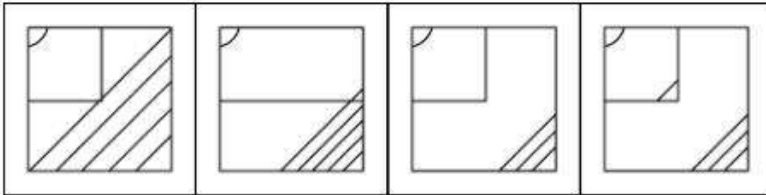
Question Key Details :

Key	Value
Comprehension	MCQ

പ്രശ്ന ചിത്രം



ഉത്തരം



(a)

(b)

(c)

(d)

1. a

2. b

3. c

4. d

Options :

485584146965. 1

485584146966. 2

485584146967. 3

485584146968. 4

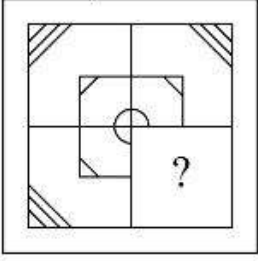
Question Number : 107 Question Id : 48558436742 Question Type : MCQ Option Shuffling : No Is Question Mandatory : No Calculator : None Response Time : N.A Think Time : N.A Minimum Instruction Time : 0

Correct Marks : 5 Wrong Marks : 1

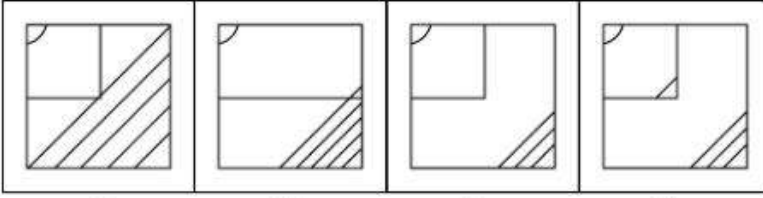
Question Key Details :

Key	Value
Comprehension	MCQ

प्रश्न आकृती



उत्तर आकृती



(a)

(b)

(c)

(d)

1. a

2. b

3. c

4. d

Options :

485584146965. 1

485584146966. 2

485584146967. 3

485584146968. 4

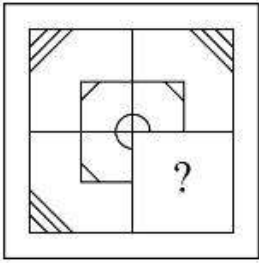
Question Number : 107 Question Id : 48558436742 Question Type : MCQ Option Shuffling : No Is Question Mandatory : No Calculator : None Response Time : N.A Think Time : N.A Minimum Instruction Time : 0

Correct Marks : 5 Wrong Marks : 1

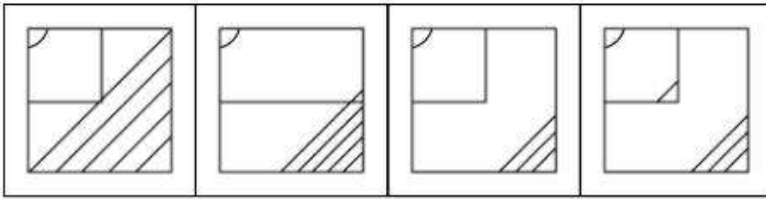
Question Key Details :

Key	Value
Comprehension	MCQ

ସମସ୍ୟା ବା କଠିନ ପ୍ରଶ୍ନ ଚିତ୍ର



ଉତ୍ତର ଚିତ୍ର



(a)

(b)

(c)

(d)

1. a

2. b

3. c

4. d

Options :

485584146965. 1

485584146966. 2

485584146967. 3

485584146968. 4

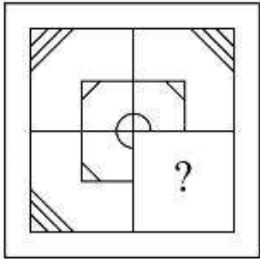
Question Number : 107 Question Id : 48558436742 Question Type : MCQ Option Shuffling : No Is Question Mandatory : No Calculator : None Response Time : N.A Think Time : N.A Minimum Instruction Time : 0

Correct Marks : 5 Wrong Marks : 1

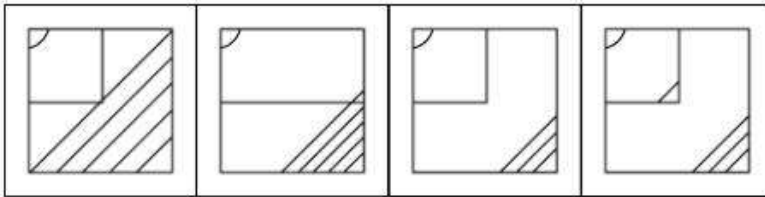
Question Key Details :

Key	Value
Comprehension	MCQ

ਸਮੱਸਿਆ ਚਿੱਤਰ -



ਉੱਤਰ ਚਿੱਤਰ



(a)

(b)

(c)

(d)

1. a

2. b

3. c

4. d

Options :

485584146965. 1

485584146966. 2

485584146967. 3

485584146968. 4

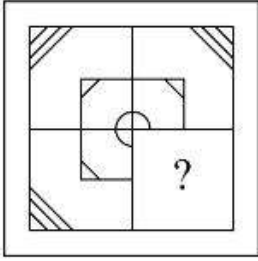
Question Number : 107 Question Id : 48558436742 Question Type : MCQ Option Shuffling : No Is Question Mandatory : No Calculator : None Response Time : N.A Think Time : N.A Minimum Instruction Time : 0

Correct Marks : 5 Wrong Marks : 1

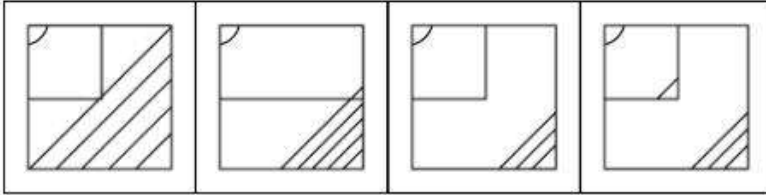
Question Key Details :

Key	Value
Comprehension	MCQ

கேள்வி படம்



விடை படம்



(a)

(b)

(c)

(d)

1. a

2. b

3. c

4. d

Options :

485584146965. 1

485584146966. 2

485584146967. 3

485584146968. 4

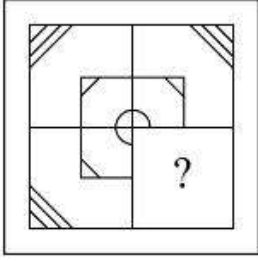
Question Number : 107 Question Id : 48558436742 Question Type : MCQ Option Shuffling : No Is Question Mandatory : No Calculator : None Response Time : N.A Think Time : N.A Minimum Instruction Time : 0

Correct Marks : 5 Wrong Marks : 1

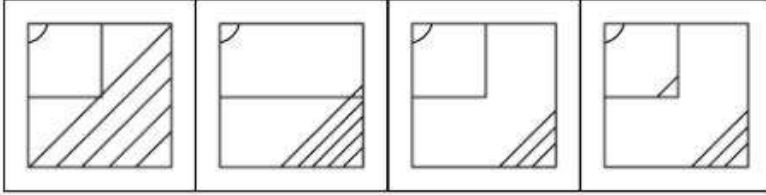
Question Key Details :

Key	Value
Comprehension	MCQ

ప్రశ్న పటం



జవాబు పటాలు



(a)

(b)

(c)

(d)

1. a

2. b

3. c

4. d

Options :

485584146965. 1

485584146966. 2

485584146967. 3

485584146968. 4

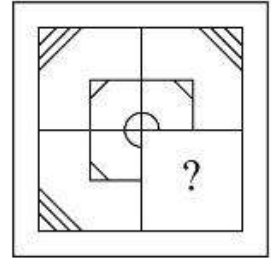
Question Number : 107 Question Id : 48558436742 Question Type : MCQ Option Shuffling : No Is Question Mandatory : No Calculator : None Response Time : N.A Think Time : N.A Minimum Instruction Time : 0

Correct Marks : 5 Wrong Marks : 1

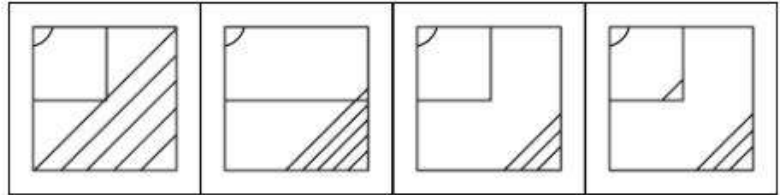
Question Key Details :

Key	Value
Comprehension	MCQ

سوالیہ شکل



جوابیہ شکل



(a)

(b)

(c)

(d)

1. a

2. b

3. c

4. d

Options :

485584146965. 1

485584146966. 2

485584146967. 3

485584146968. 4

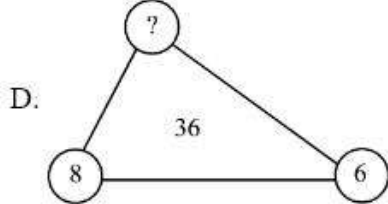
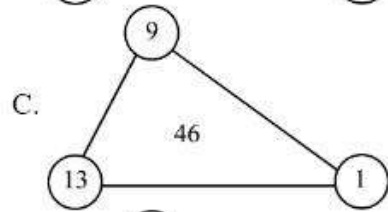
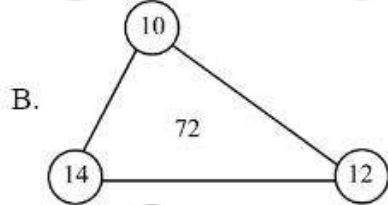
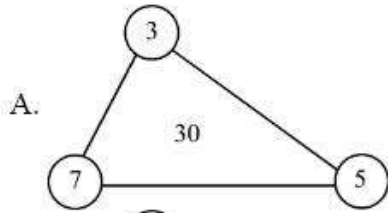
Question Number : 108 Question Id : 48558436743 Question Type : MCQ Option Shuffling : No Is Question Mandatory : No Calculator : None Response Time : N.A Think Time : N.A Minimum Instruction Time : 0

Correct Marks : 5 Wrong Marks : 1

Question Key Details :

Key	Value
Comprehension	MCQ

What number should replace the question mark ?



1. 12

2. 2

3. 4

4. 3

Options :

485584146969. 1

485584146970. 2

485584146971. 3

485584146972. 4

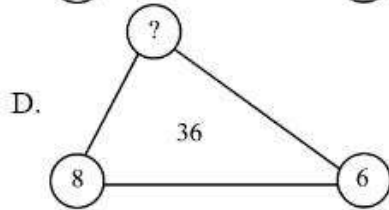
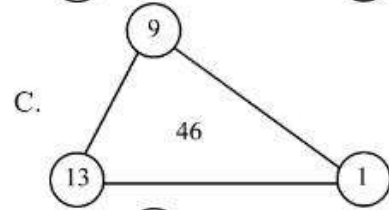
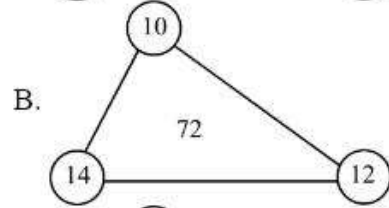
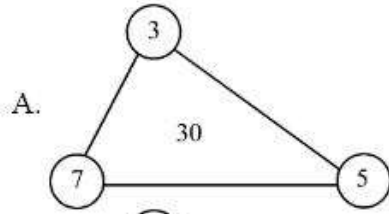
Question Number : 108 Question Id : 48558436743 Question Type : MCQ Option Shuffling : No Is Question Mandatory : No Calculator : None Response Time : N.A Think Time : N.A Minimum Instruction Time : 0

Correct Marks : 5 Wrong Marks : 1

Question Key Details :

Key	Value
Comprehension	MCQ

प्रश्न चिन्ह के स्थान पर कौन सी संख्या आएगी:



1. 12

2. 2

3. 4

4. 3

Options :

485584146969. 1

485584146970. 2

485584146971. 3

485584146972. 4

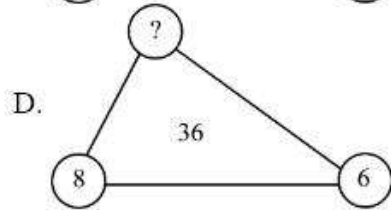
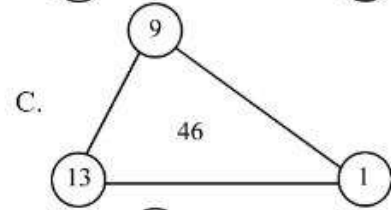
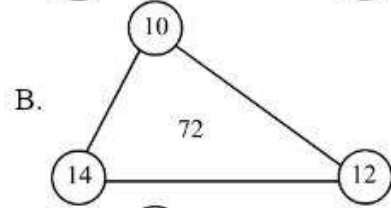
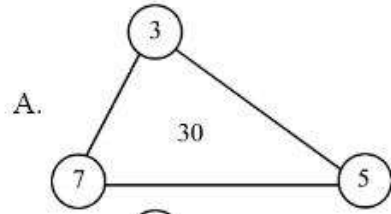
Question Number : 108 Question Id : 48558436743 Question Type : MCQ Option Shuffling : No Is Question Mandatory : No Calculator : None Response Time : N.A Think Time : N.A Minimum Instruction Time : 0

Correct Marks : 5 Wrong Marks : 1

Question Key Details :

Key	Value
Comprehension	MCQ

প্রশ্ন চিহ্নৰ স্থানত কোনটো সংখ্যা বহিব?



1. 12

2. 2

3. 4

4. 3

Options :

485584146969. 1

485584146970. 2

485584146971. 3

485584146972. 4

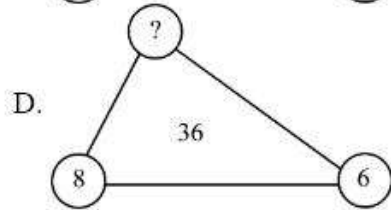
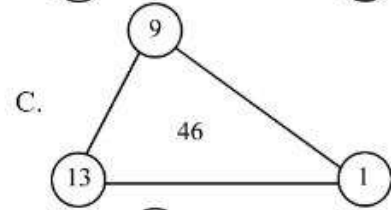
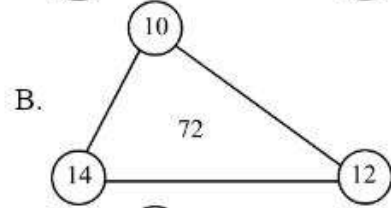
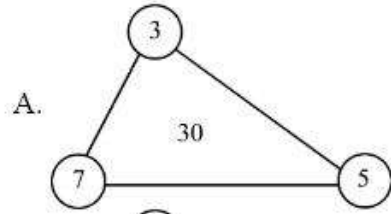
Question Number : 108 Question Id : 48558436743 Question Type : MCQ Option Shuffling : No Is Question Mandatory : No Calculator : None Response Time : N.A Think Time : N.A Minimum Instruction Time : 0

Correct Marks : 5 Wrong Marks : 1

Question Key Details :

Key	Value
Comprehension	MCQ

প্রশ্নচিত্র স্থানে কোন সংখ্যা থাকা উচিত ?



1. 12

2. 2

3. 4

4. 3

Options :

485584146969. 1

485584146970. 2

485584146971. 3

485584146972. 4

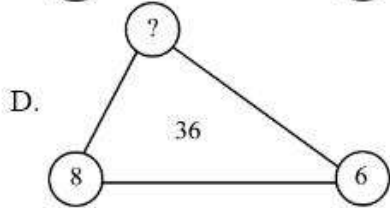
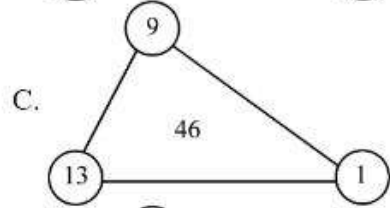
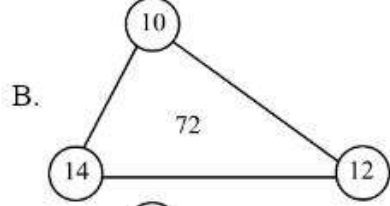
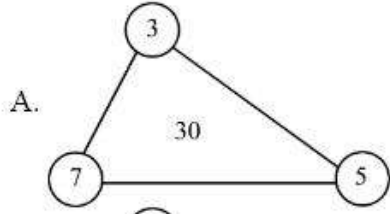
Question Number : 108 Question Id : 48558436743 Question Type : MCQ Option Shuffling : No Is Question Mandatory : No Calculator : None Response Time : N.A Think Time : N.A Minimum Instruction Time : 0

Correct Marks : 5 Wrong Marks : 1

Question Key Details :

Key	Value
Comprehension	MCQ

કયાં અંક થી પ્રશ્ન ચિહ્ન ને બદલી શકાય છે ?



1. 12

2. 2

3. 4

4. 3

Options :

485584146969. 1

485584146970. 2

485584146971. 3

485584146972. 4

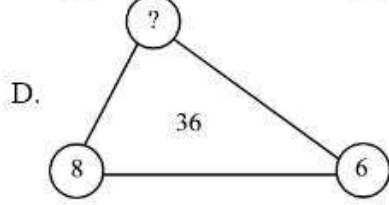
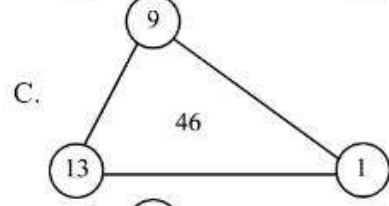
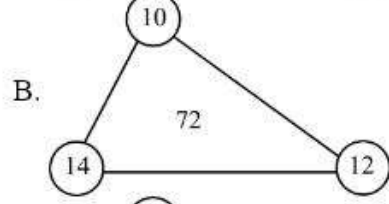
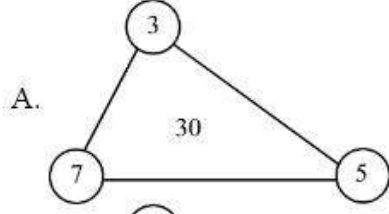
Question Number : 108 Question Id : 48558436743 Question Type : MCQ Option Shuffling : No Is Question Mandatory : No Calculator : None Response Time : N.A Think Time : N.A Minimum Instruction Time : 0

Correct Marks : 5 Wrong Marks : 1

Question Key Details :

Key	Value
Comprehension	MCQ

ಯಾವ ಸಂಖ್ಯೆಯು ಪ್ರಶ್ನಾರ್ಥಕ ಚಿಹ್ನೆಯನ್ನು ಬದಲಿಸಬೇಕು?



1. 12

2. 2

3. 4

4. 3

Options :

485584146969. 1

485584146970. 2

485584146971. 3

485584146972. 4

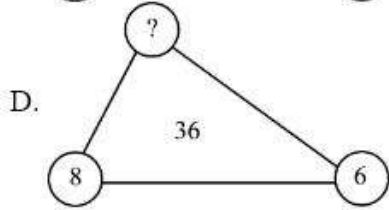
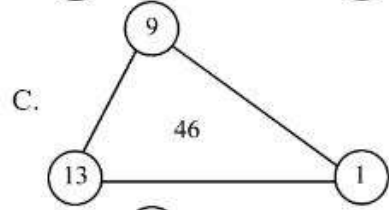
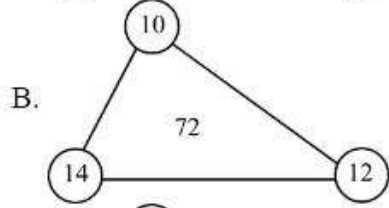
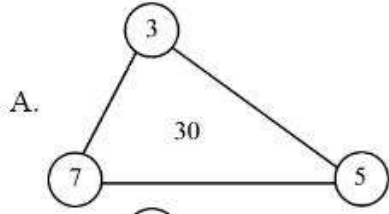
Question Number : 108 Question Id : 48558436743 Question Type : MCQ Option Shuffling : No Is Question Mandatory : No Calculator : None Response Time : N.A Think Time : N.A Minimum Instruction Time : 0

Correct Marks : 5 Wrong Marks : 1

Question Key Details :

Key	Value
Comprehension	MCQ

ഏത് സംഖ്യ (?) ചോദ്യചിഹ്നത്തിന്റെ സ്ഥാനത്ത് വരും ?



1. 12
2. 2
3. 4
4. 3

Options :

- 485584146969. 1
- 485584146970. 2
- 485584146971. 3
- 485584146972. 4

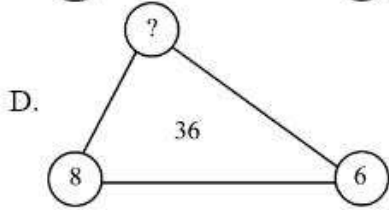
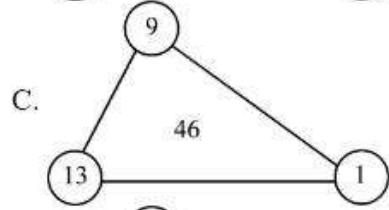
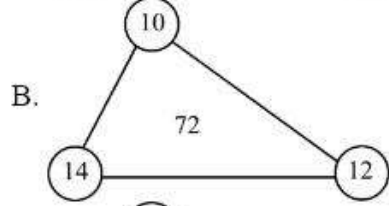
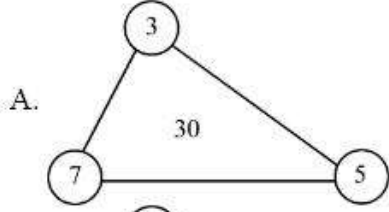
Question Number : 108 Question Id : 48558436743 Question Type : MCQ Option Shuffling : No Is Question Mandatory : No Calculator : None Response Time : N.A Think Time : N.A Minimum Instruction Time : 0

Correct Marks : 5 Wrong Marks : 1

Question Key Details :

Key	Value
Comprehension	MCQ

प्रश्नचिन्हाच्या जागी कोणती संख्या येईल?



1. 12

2. 2

3. 4

4. 3

Options :

485584146969. 1

485584146970. 2

485584146971. 3

485584146972. 4

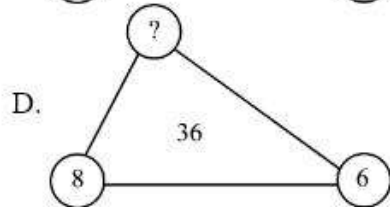
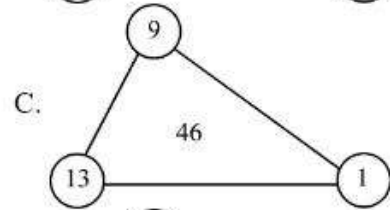
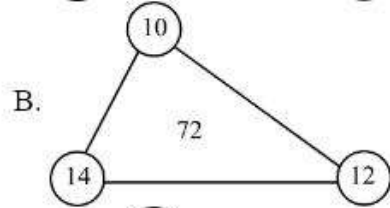
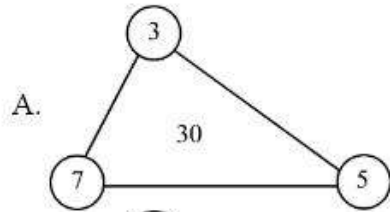
Question Number : 108 Question Id : 48558436743 Question Type : MCQ Option Shuffling : No Is Question Mandatory : No Calculator : None Response Time : N.A Think Time : N.A Minimum Instruction Time : 0

Correct Marks : 5 Wrong Marks : 1

Question Key Details :

Key	Value
Comprehension	MCQ

କେଉଁ ସଂଖ୍ୟାଟି ପ୍ରଶ୍ନଟିର ଉତ୍ତର ହେବ?



1. 12

2. 2

3. 4

4. 3

Options :

485584146969. 1

485584146970. 2

485584146971. 3

485584146972. 4

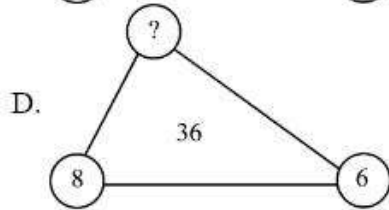
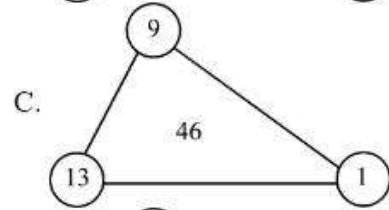
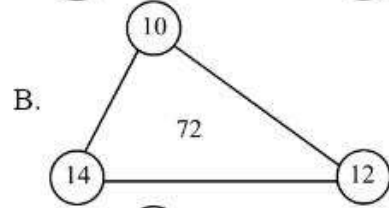
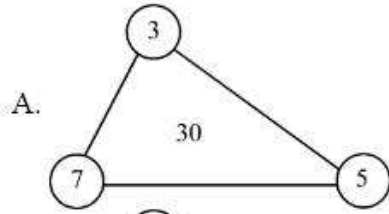
Question Number : 108 Question Id : 48558436743 Question Type : MCQ Option Shuffling : No Is Question Mandatory : No Calculator : None Response Time : N.A Think Time : N.A Minimum Instruction Time : 0

Correct Marks : 5 Wrong Marks : 1

Question Key Details :

Key	Value
Comprehension	MCQ

ਪ੍ਰਸ਼ਨ ਚਿੰਨ੍ਹ ਦੀ ਥਾਂ ਸਹੀ ਵਿਕਲਪ ਚੁਣੋ -



1. 12

2. 2

3. 4

4. 3

Options :

485584146969. 1

485584146970. 2

485584146971. 3

485584146972. 4

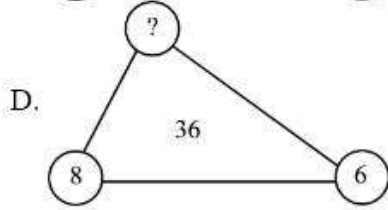
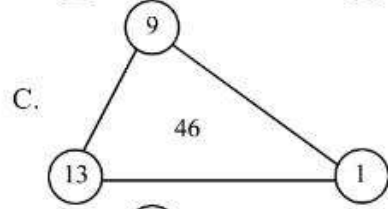
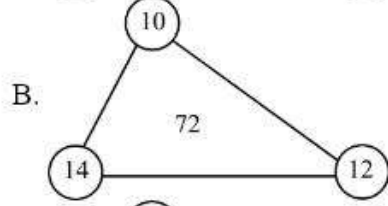
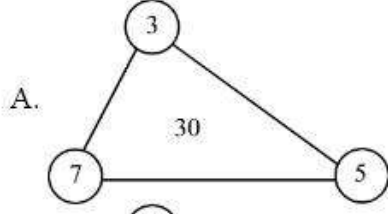
Question Number : 108 Question Id : 48558436743 Question Type : MCQ Option Shuffling : No Is Question Mandatory : No Calculator : None Response Time : N.A Think Time : N.A Minimum Instruction Time : 0

Correct Marks : 5 Wrong Marks : 1

Question Key Details :

Key	Value
Comprehension	MCQ

படத்தில் உள்ள கேள்விக் குறியை நிரப்பும் எண் எது?



1. 12

2. 2

3. 4

4. 3

Options :

485584146969. 1

485584146970. 2

485584146971. 3

485584146972. 4

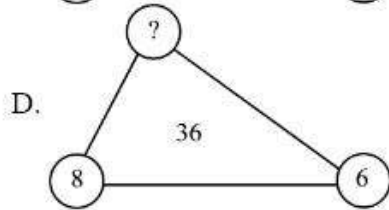
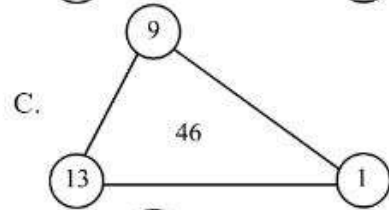
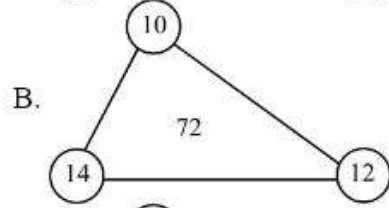
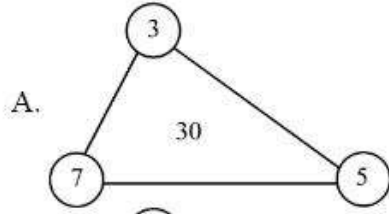
Question Number : 108 Question Id : 48558436743 Question Type : MCQ Option Shuffling : No Is Question Mandatory : No Calculator : None Response Time : N.A Think Time : N.A Minimum Instruction Time : 0

Correct Marks : 5 Wrong Marks : 1

Question Key Details :

Key	Value
Comprehension	MCQ

ప్రశ్నార్థకం పూరించే సంఖ్య ఏమిటి?



1. 12

2. 2

3. 4

4. 3

Options :

485584146969. 1

485584146970. 2

485584146971. 3

485584146972. 4

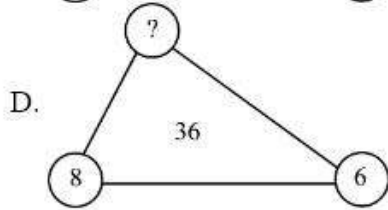
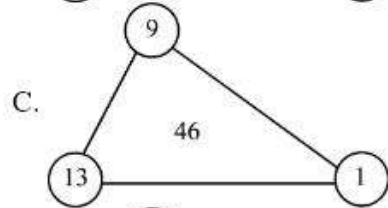
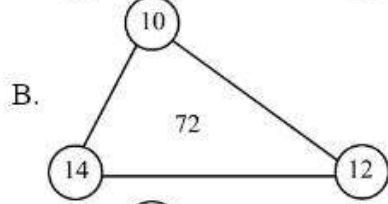
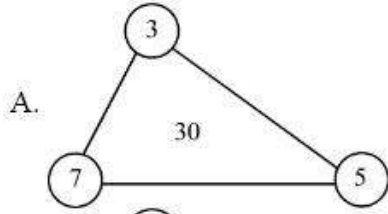
Question Number : 108 Question Id : 48558436743 Question Type : MCQ Option Shuffling : No Is Question Mandatory : No Calculator : None Response Time : N.A Think Time : N.A Minimum Instruction Time : 0

Correct Marks : 5 Wrong Marks : 1

Question Key Details :

Key	Value
Comprehension	MCQ

سوالیہ نشان (?) کی جگہ کون سا نمبر آئے گا ؟



1. 12

2. 2

3. 4

4. 3

Options :

485584146969. 1

485584146970. 2

485584146971. 3

485584146972. 4

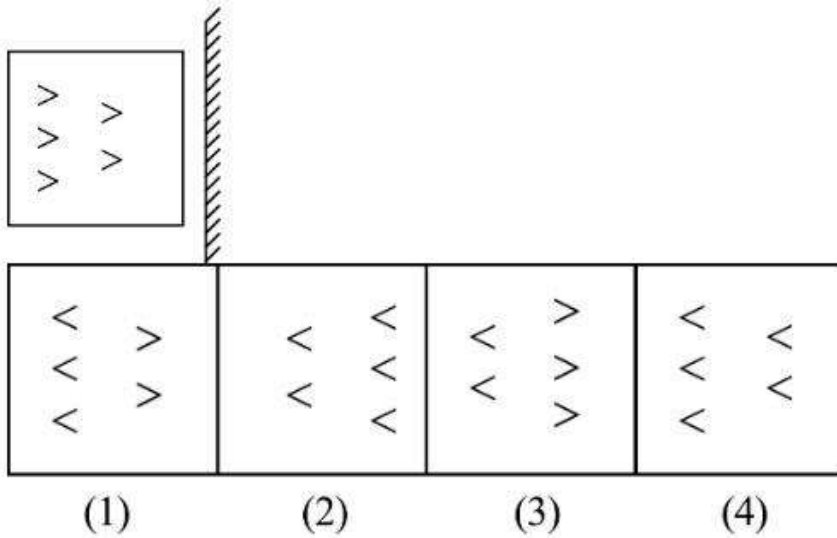
Question Number : 109 Question Id : 48558436744 Question Type : MCQ Option Shuffling : No Is Question Mandatory : No Calculator : None Response Time : N.A Think Time : N.A Minimum Instruction Time : 0

Correct Marks : 5 Wrong Marks : 1

Question Key Details :

Key	Value
Comprehension	MCQ

In each of the following question, choose the correct mirror image from alternative (1), (2), (3) and (4) of the figure (A).



1. 1

2. 2

3. 3

4. 4

Options :

- 485584146973. 1
- 485584146974. 2
- 485584146975. 3
- 485584146976. 4

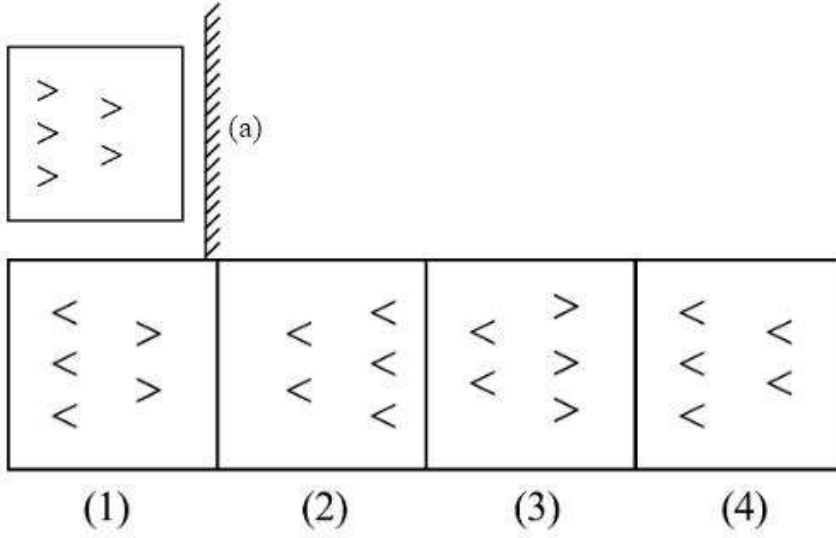
Question Number : 109 Question Id : 48558436744 Question Type : MCQ Option Shuffling : No Is Question Mandatory : No Calculator : None Response Time : N.A Think Time : N.A Minimum Instruction Time : 0

Correct Marks : 5 Wrong Marks : 1

Question Key Details :

Key	Value
Comprehension	MCQ

नीचे दिए गए प्रश्न में चित्र (A), विकल्पों (1), (2), (3) तथा (4) में से, दर्पण में बनने वाली सही छाया को छाँटें।



1. 1

2. 2

3. 3

4. 4

Options :

485584146973. 1

485584146974. 2

485584146975. 3

485584146976. 4

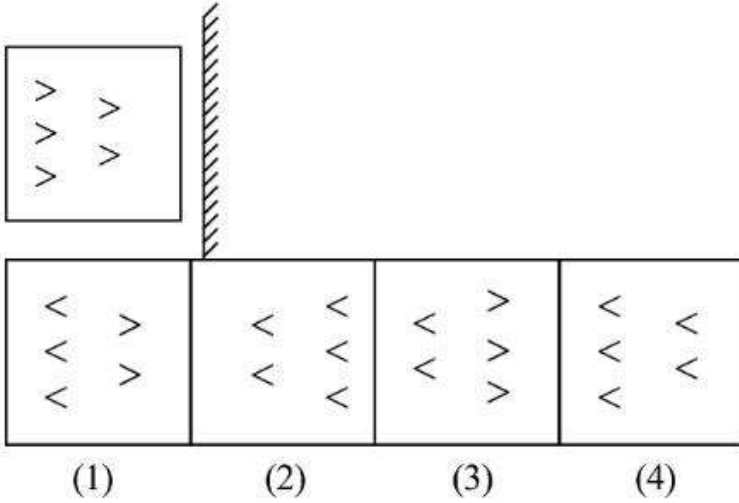
Question Number : 109 Question Id : 48558436744 Question Type : MCQ Option Shuffling : No Is Question Mandatory : No Calculator : None Response Time : N.A Think Time : N.A Minimum Instruction Time : 0

Correct Marks : 5 Wrong Marks : 1

Question Key Details :

Key	Value
Comprehension	MCQ

তলৰ (A) চিত্ৰটোৰ বাবে (1), (2), (3) আৰু (4) বিকল্পৰ পৰা শুদ্ধ প্ৰতিবিম্ব চিত্ৰটো চিনাক্ত কৰা :



1. 1

2. 2

3. 3

4. 4

Options :

485584146973. 1

485584146974. 2

485584146975. 3

485584146976. 4

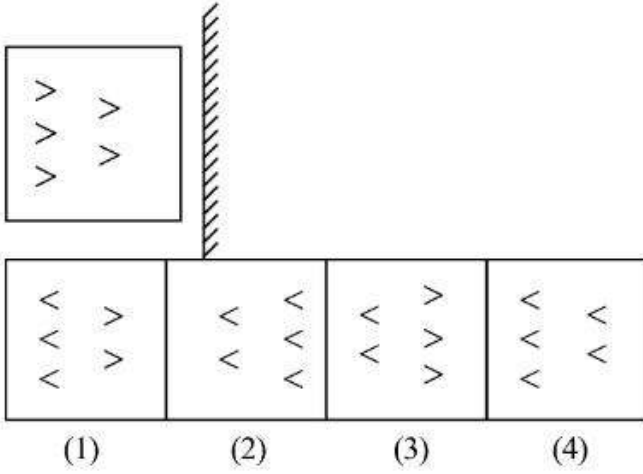
Question Number : 109 Question Id : 48558436744 Question Type : MCQ Option Shuffling : No Is Question Mandatory : No Calculator : None Response Time : N.A Think Time : N.A Minimum Instruction Time : 0

Correct Marks : 5 Wrong Marks : 1

Question Key Details :

Key	Value
Comprehension	MCQ

নীচের প্রতিটি প্রশ্নে A চিত্রের বিকল্প (1), (2), (3) এবং (4) থেকে সঠিক বিপ্রতীপ পার্শ্বপ্রতিবিম্বটি বেছে নিন।



1. 1

2. 2

3. 3

4. 4

Options :

485584146973. 1

485584146974. 2

485584146975. 3

485584146976. 4

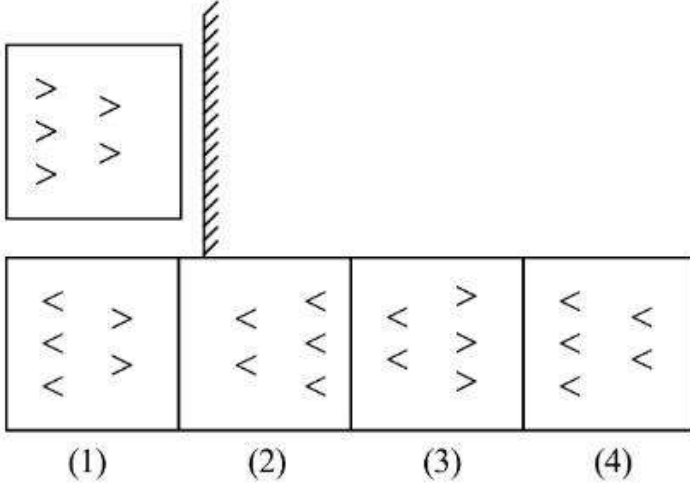
Question Number : 109 Question Id : 48558436744 Question Type : MCQ Option Shuffling : No Is Question Mandatory : No Calculator : None Response Time : N.A Think Time : N.A Minimum Instruction Time : 0

Correct Marks : 5 Wrong Marks : 1

Question Key Details :

Key	Value
Comprehension	MCQ

નીચે આપેલ પ્રશ્નમાં વિકલ્પ (1), (2), (3) અને (4) માંથી સાચું આરસી પ્રતીબિંબ શોધો.



1. 1

2. 2

3. 3

4. 4

Options :

485584146973. 1

485584146974. 2

485584146975. 3

485584146976. 4

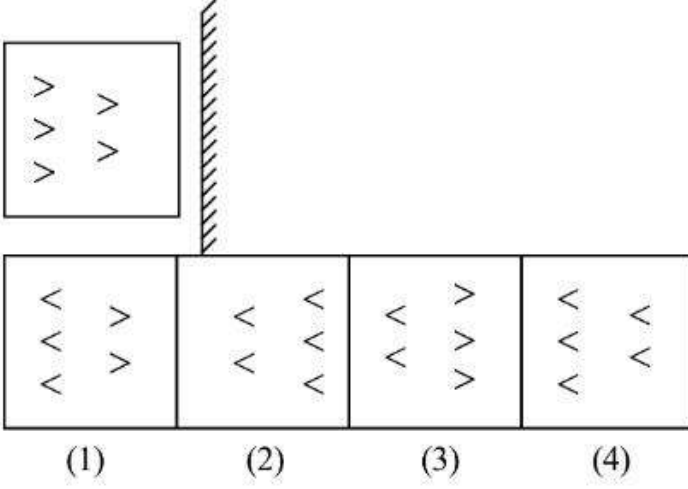
Question Number : 109 Question Id : 48558436744 Question Type : MCQ Option Shuffling : No Is Question Mandatory : No Calculator : None Response Time : N.A Think Time : N.A Minimum Instruction Time : 0

Correct Marks : 5 Wrong Marks : 1

Question Key Details :

Key	Value
Comprehension	MCQ

ಕೆಳಗಿನ ಪ್ರತಿಯೊಂದು ಪ್ರಶ್ನೆಯಲ್ಲಿ, ಚಿತ್ರ (A) ಯ ಸರಿಯಾದ ಕನ್ನಡಿಯ ಪ್ರತಿಬಿಂಬವನ್ನು (1), (2), (3) ಮತ್ತು (4) ಪರ್ಯಾಯಗಳಿಂದ ಆರಿಸಿ.



1. 1

2. 2

3. 3

4. 4

Options :

485584146973. 1

485584146974. 2

485584146975. 3

485584146976. 4

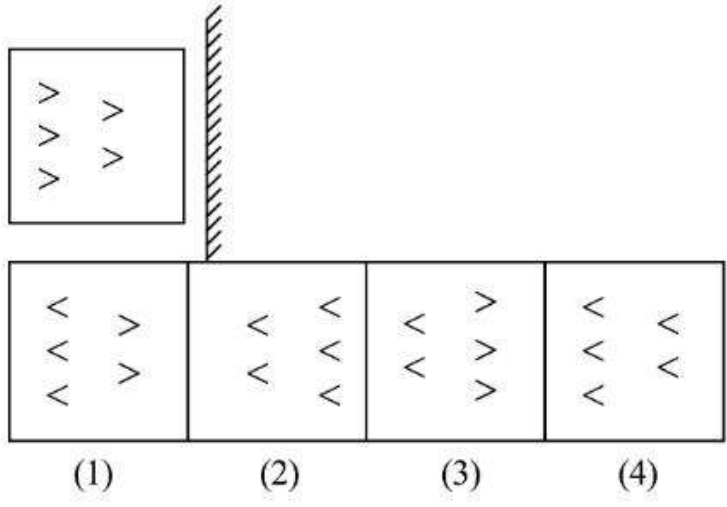
Question Number : 109 Question Id : 48558436744 Question Type : MCQ Option Shuffling : No Is Question Mandatory : No Calculator : None Response Time : N.A Think Time : N.A Minimum Instruction Time : 0

Correct Marks : 5 Wrong Marks : 1

Question Key Details :

Key	Value
Comprehension	MCQ

(A) യിൽ തന്നിരിക്കുന്ന ചിത്രത്തിന്റെ യഥാർത്ഥ കണ്ണാടി പ്രതിബിംബം ഏത് ?



- 1. 1
- 2. 2
- 3. 3
- 4. 4

Options :

- 485584146973. 1
- 485584146974. 2
- 485584146975. 3
- 485584146976. 4

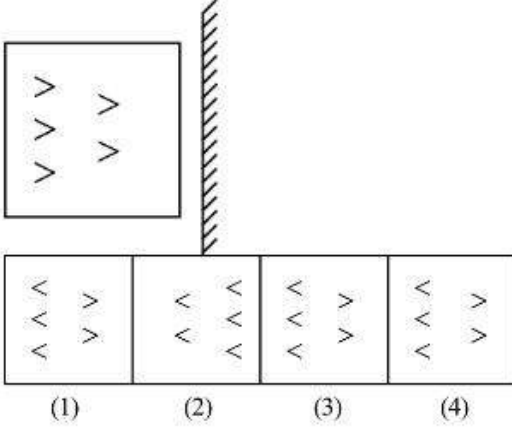
Question Number : 109 Question Id : 48558436744 Question Type : MCQ Option Shuffling : No Is Question Mandatory : No Calculator : None Response Time : N.A Think Time : N.A Minimum Instruction Time : 0

Correct Marks : 5 Wrong Marks : 1

Question Key Details :

Key	Value
Comprehension	MCQ

खाली दिलेल्या प्रश्नामध्ये आकृती A चे आरशातील योग्य प्रतिबिंब दिलेल्या पर्याय (1), (2), (3) आणि (4) मधून निवडा.



1. 1

2. 2

3. 3

4. 4

Options :

485584146973. 1

485584146974. 2

485584146975. 3

485584146976. 4

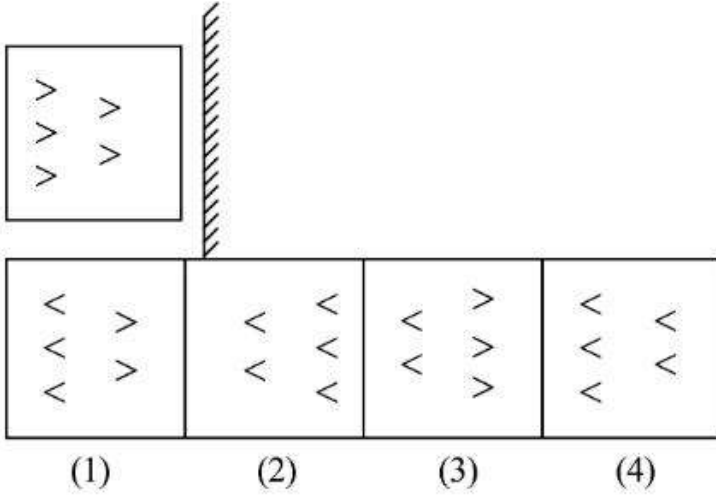
Question Number : 109 Question Id : 48558436744 Question Type : MCQ Option Shuffling : No Is Question Mandatory : No Calculator : None Response Time : N.A Think Time : N.A Minimum Instruction Time : 0

Correct Marks : 5 Wrong Marks : 1

Question Key Details :

Key	Value
Comprehension	MCQ

ନିମ୍ନରୁ ପ୍ରତ୍ୟେକ ପ୍ରଶ୍ନରେ, ସଠିକ୍ ଆଇନା ପ୍ରତିବିମ୍ବ ମାନଙ୍କୁ ବିକଳ (1), (2), (3) ଏବଂ (4) ଚିତ୍ର (A) ରୁ ବାଛିବୁ:



1. 1

2. 2

3. 3

4. 4

Options :

485584146973. 1

485584146974. 2

485584146975. 3

485584146976. 4

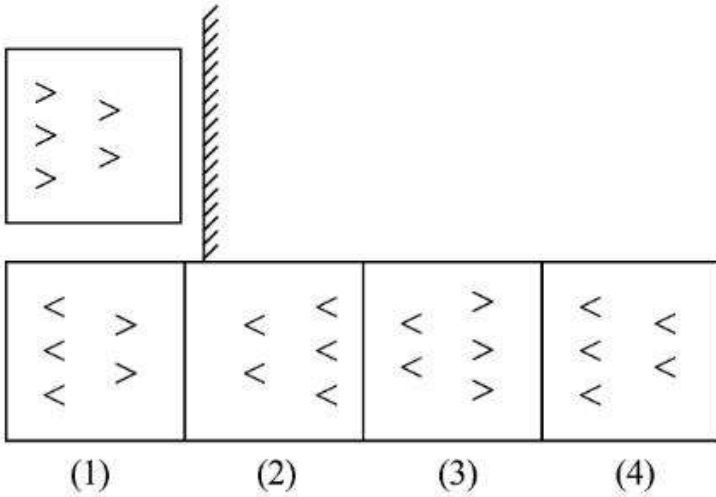
Question Number : 109 Question Id : 48558436744 Question Type : MCQ Option Shuffling : No Is Question Mandatory : No Calculator : None Response Time : N.A Think Time : N.A Minimum Instruction Time : 0

Correct Marks : 5 Wrong Marks : 1

Question Key Details :

Key	Value
Comprehension	MCQ

ਹੇਠਾਂ ਦਿੱਤੇ ਹਰ ਪ੍ਰਸ਼ਨ ਵਿੱਚ ਵਿਕਲਪਾਂ ਵਿੱਚੋਂ ਸਹੀ ਸ਼ੀਸ਼ੇ ਦੀ ਤਸਵੀਰ ਚੁਣੋ (1), (2), (3) ਅਤੇ (4) (A) ਦੇ ਚਿੱਤਰ ਤੋਂ



1. 1

2. 2

3. 3

4. 4

Options :

485584146973. 1

485584146974. 2

485584146975. 3

485584146976. 4

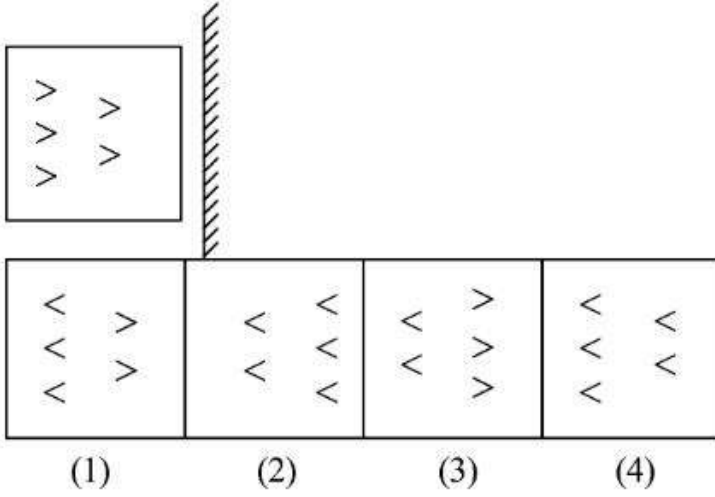
Question Number : 109 Question Id : 48558436744 Question Type : MCQ Option Shuffling : No Is Question Mandatory : No Calculator : None Response Time : N.A Think Time : N.A Minimum Instruction Time : 0

Correct Marks : 5 Wrong Marks : 1

Question Key Details :

Key	Value
Comprehension	MCQ

பின்வரும் கேள்வியில், படம் (A)-க்கான சரியான கண்ணாடி பிம்பத்தை (1), (2), (3) மற்றும் (4) இலிருந்து தேர்ந்தெடுக்கவும்.



1. 1

2. 2

3. 3

4. 4

Options :

485584146973. 1

485584146974. 2

485584146975. 3

485584146976. 4

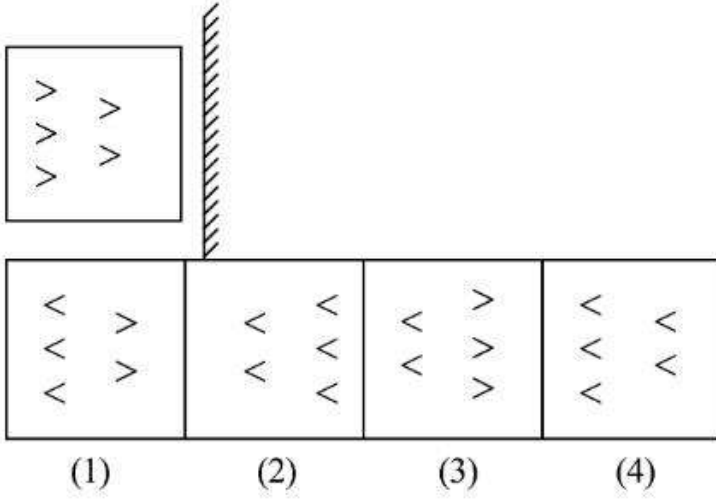
Question Number : 109 Question Id : 48558436744 Question Type : MCQ Option Shuffling : No Is Question Mandatory : No Calculator : None Response Time : N.A Think Time : N.A Minimum Instruction Time : 0

Correct Marks : 5 Wrong Marks : 1

Question Key Details :

Key	Value
Comprehension	MCQ

కింది వాటిలో చిత్రం (A) కి దర్పణ ప్రతిబింబం (1), (2), (3) మరియు (4) లో గుర్తించండి.



1. 1

2. 2

3. 3

4. 4

Options :

485584146973. 1

485584146974. 2

485584146975. 3

485584146976. 4

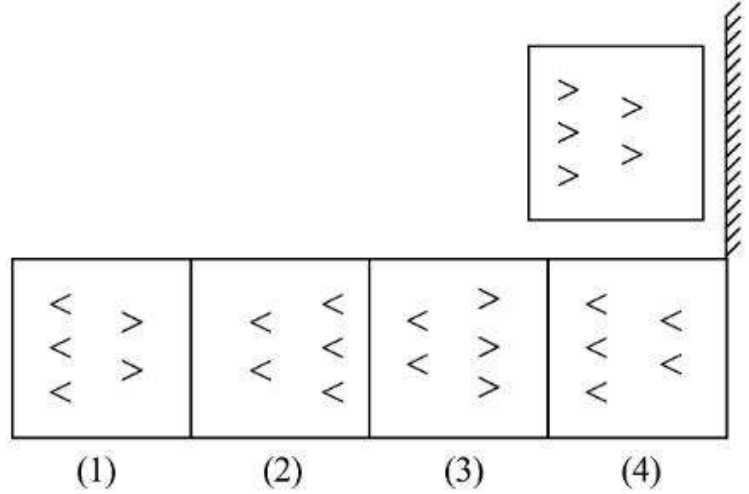
Question Number : 109 Question Id : 48558436744 Question Type : MCQ Option Shuffling : No Is Question Mandatory : No Calculator : None Response Time : N.A Think Time : N.A Minimum Instruction Time : 0

Correct Marks : 5 Wrong Marks : 1

Question Key Details :

Key	Value
Comprehension	MCQ

مندرجہ ذیل دی ہوئی شکل کی آئنے والی تصویر کی شناخت کریں :



1. 1

2. 2

3. 3

4. 4

Options :

485584146973. 1

485584146974. 2

485584146975. 3

485584146976. 4

Question Number : 110 Question Id : 48558436745 Question Type : MCQ Option Shuffling : No Is Question Mandatory : No Calculator : None Response Time : N.A Think Time : N.A Minimum Instruction Time : 0

Correct Marks : 5 Wrong Marks : 1

Question Key Details :

Key	Value
Comprehension	MCQ

In a certain code language, TILE is written as 3465 and SMART it written as 72183. How will ALERT be written in that code language ?

1. 15624

2. 16542

3. 14532

4. 16583

Options :

485584146977. 1

485584146978. 2

485584146979. 3

485584146980. 4

Question Number : 110 Question Id : 48558436745 Question Type : MCQ Option Shuffling : No Is Question Mandatory : No Calculator : None Response Time : N.A Think Time : N.A Minimum Instruction Time : 0

Correct Marks : 5 Wrong Marks : 1

Question Key Details :

Key	Value
Comprehension	MCQ

एक गुप्त भाषा में, TILE को 3465 लिखा जाता है। तथा SMART को 72183 लिखा जाता है। इस गुप्त भाषा में ALERT को किस प्रकार लिखा जाएगा?

1. 15624

2. 16542

3. 14532

4. 16583

Options :

485584146977. 1

485584146978. 2

485584146979. 3

485584146980. 4

Question Number : 110 Question Id : 48558436745 Question Type : MCQ Option Shuffling : No Is Question Mandatory : No Calculator : None Response Time : N.A Think Time : N.A Minimum Instruction Time : 0

Correct Marks : 5 Wrong Marks : 1

Question Key Details :

Key	Value
Comprehension	MCQ

এটা বিশেষ সাংকেতিক ভাষাত TILE ক 3465 হিচাপে আৰু SMART ক 72183 হিচাপে লিখা হৈছে। সেই ভাষাত ALERT ক কেনেকৈ লিখা হ'ব ?

1. 15624

2. 16542

3. 14532

4. 16583

Options :

485584146977. 1

485584146978. 2

485584146979. 3

485584146980. 4

Question Number : 110 Question Id : 48558436745 Question Type : MCQ Option Shuffling : No Is Question Mandatory : No Calculator : None Response Time : N.A Think Time : N.A Minimum Instruction Time : 0

Correct Marks : 5 Wrong Marks : 1

Question Key Details :

Key	Value
Comprehension	MCQ

একটি নির্দিষ্ট কোডের ভাষায় TILE লেখা হয় 3465 এবং SMART লেখা হয় 72183। তাহলে ALERT কোডের ভাষা কী হবে ?

1. 15624

2. 16542

3. 14532

4. 16583

Options :

485584146977. 1

485584146978. 2

485584146979. 3

485584146980. 4

Question Number : 110 Question Id : 48558436745 Question Type : MCQ Option Shuffling : No Is Question Mandatory : No Calculator : None Response Time : N.A Think Time : N.A Minimum Instruction Time : 0

Correct Marks : 5 Wrong Marks : 1

Question Key Details :

Key	Value
Comprehension	MCQ

કોઈ એક સાંક્રેતિક ભાષામાં TILE ને 3465 લખાય છે અને SMART ને 72183 લખાય છે. તો સાંક્રેતિક ભાષામાં ALERT ને કેવી રીતે લખી શકાશે ?

1. 15624

2. 16542

3. 14532

4. 16583

Options :

485584146977. 1

485584146978. 2

485584146979. 3

485584146980. 4

Question Number : 110 Question Id : 48558436745 Question Type : MCQ Option Shuffling : No Is Question Mandatory : No Calculator : None Response Time : N.A Think Time : N.A Minimum Instruction Time : 0

Correct Marks : 5 Wrong Marks : 1

Question Key Details :

Key	Value
Comprehension	MCQ

ಒಂದು ನಿರ್ದಿಷ್ಟ ಸಂಕೇತ ಭಾಷೆಯಲ್ಲಿ TILE ಅನ್ನು 3465 ಮತ್ತು SMART ಅನ್ನು 72183 ಎಂದು ಬರೆಯುತ್ತಾರೆ. ALERT ಅನ್ನು ಆ ಸಂಕೇತ ಭಾಷೆಯಲ್ಲಿ ಹೇಗೆ ಬರೆಯಬಹುದು?

1. 15624
2. 16542
3. 14532
4. 16583

Options :

485584146977. 1
485584146978. 2
485584146979. 3
485584146980. 4

Question Number : 110 Question Id : 48558436745 Question Type : MCQ Option Shuffling : No Is Question Mandatory : No Calculator : None Response Time : N.A Think Time : N.A Minimum Instruction Time : 0

Correct Marks : 5 Wrong Marks : 1

Question Key Details :

Key	Value
Comprehension	MCQ

ಒಂದು ನಿರ್ದಿಷ್ಟ ಸಂಕೇತ ಭಾಷೆಯಲ್ಲಿ TILE ಅನ್ನು 3465 ಮತ್ತು SMART ಅನ್ನು 72183 ಎಂದು ಬರೆಯುತ್ತಾರೆ. ALERT ಅನ್ನು ಆ ಸಂಕೇತ ಭಾಷೆಯಲ್ಲಿ ಹೇಗೆ ಬರೆಯಬಹುದು?

1. 15624
2. 16542
3. 14532
4. 16583

Options :

485584146977. 1
485584146978. 2
485584146979. 3
485584146980. 4

Question Number : 110 Question Id : 48558436745 Question Type : MCQ Option Shuffling : No Is Question Mandatory : No Calculator : None Response Time : N.A Think Time : N.A Minimum Instruction Time : 0

Correct Marks : 5 Wrong Marks : 1

Question Key Details :

Key	Value
Comprehension	MCQ

एका सांकेतिक भाषेत TILE हे 3465 आणि SMART हे 72183 असे लिहितात. तर त्याच सांकेतिक भाषेत ALERT कसे लिहाल?

1. 15624

2. 16542

3. 14532

4. 16583

Options :

485584146977. 1

485584146978. 2

485584146979. 3

485584146980. 4

Question Number : 110 Question Id : 48558436745 Question Type : MCQ Option Shuffling : No Is Question Mandatory : No Calculator : None Response Time : N.A Think Time : N.A Minimum Instruction Time : 0

Correct Marks : 5 Wrong Marks : 1

Question Key Details :

Key	Value
Comprehension	MCQ

गोठिं नरिंशु कौडु (गुडु) डलडलरे TILE कु 3465 एवु SMART कु 72183 डलडलरे लेखलडलडलडल. डेडेवे ALERT कु डेडल कौडु डलडलरे केडे लेखलडलडलडल?

1. 15624

2. 16542

3. 14532

4. 16583

Options :

485584146977. 1

485584146978. 2

485584146979. 3

485584146980. 4

Question Number : 110 Question Id : 48558436745 Question Type : MCQ Option Shuffling : No Is Question Mandatory : No Calculator : None Response Time : N.A Think Time : N.A Minimum Instruction Time : 0

Correct Marks : 5 Wrong Marks : 1

Question Key Details :

Key	Value
Comprehension	MCQ

ਇੱਕ ਨਿਸ਼ਚਿਤ ਕੋਡ ਭਾਸ਼ਾ ਵਿੱਚ, TILE 3465 ਵਾਂਗ ਲਿਖਿਆ ਜਾਂਦਾ ਹੈ ਅਤੇ SMART 72183 ਵਾਂਗ ਲਿਖਿਆ ਜਾਂਦਾ ਹੈ।
ALERT ਉਸ ਕੋਡ ਭਾਸ਼ਾ ਵਿੱਚ ਕਿਵੇਂ ਲਿਖਿਆ ਜਾਵੇਗਾ?

1. 15624
2. 16542
3. 14532
4. 16583

Options :

485584146977. 1
485584146978. 2
485584146979. 3
485584146980. 4

**Question Number : 110 Question Id : 48558436745 Question Type : MCQ Option Shuffling : No Is Question Mandatory :
No Calculator : None Response Time : N.A Think Time : N.A Minimum Instruction Time : 0**

Correct Marks : 5 Wrong Marks : 1

Question Key Details :

Key	Value
Comprehension	MCQ

ஒரு குறிப்பிட்ட குறியீட்டு மொழியில், TILE என்பது 3465 என எழுதப்பட்டுள்ளது மற்றும் SMART என்பது 72183 என எழுதப்பட்டுள்ளது. எனில் அந்த குறியீட்டு மொழியில் ALERT என்பது எவ்வாறு எழுதப்படும் ?

1. 15624
2. 16542
3. 14532
4. 16583

Options :

485584146977. 1
485584146978. 2
485584146979. 3
485584146980. 4

**Question Number : 110 Question Id : 48558436745 Question Type : MCQ Option Shuffling : No Is Question Mandatory :
No Calculator : None Response Time : N.A Think Time : N.A Minimum Instruction Time : 0**

Correct Marks : 5 Wrong Marks : 1

Question Key Details :

Key	Value
Comprehension	MCQ

ఒక భాషలో TILE అనేది 3465 మరియు SMART అనేది 72183 గా వ్రాయబడింది. అదే కోడ్ భాషలో ALERT ని ఎలా రాస్తారు?

1. 15624
2. 16542
3. 14532
4. 16583

Options :

485584146977. 1
485584146978. 2
485584146979. 3
485584146980. 4

Question Number : 110 Question Id : 48558436745 Question Type : MCQ Option Shuffling : No Is Question Mandatory : No Calculator : None Response Time : N.A Think Time : N.A Minimum Instruction Time : 0

Correct Marks : 5 Wrong Marks : 1

Question Key Details :

Key	Value
Comprehension	MCQ

ایک زبان میں TILE کو 3465 لکھا جاتا ہے اور SMART کو 72183 لکھا جاتا ہے۔ اس زبان میں ALERT کو کیسے لکھا جائے گا ؟

1. 15624
2. 16542
3. 14532
4. 16583

Options :

485584146977. 1
485584146978. 2
485584146979. 3
485584146980. 4