

# National Testing Agency

**Question Paper Name :** 18S1  
**Subject Name :** 18Jun2023 Shift1 Subject Combination 1  
**Creation Date :** 2023-06-18 15:55:18  
**Duration :** 645  
**Total Marks :** 2850  
**Display Marks:** Yes

## English

**Group Number :** 1  
**Group Id :** 485584739  
**Group Maximum Duration :** 45  
**Group Minimum Duration :** 45  
**Show Attended Group? :** No  
**Edit Attended Group? :** No  
**Break time :** 0  
**Group Marks :** 200  
**Is this Group for Examiner? :** No  
**Examiner permission :** Cant View  
**Show Progress Bar? :** No

## English

**Section Id :** 485584853  
**Section Number :** 1  
**Section type :** Online  
**Mandatory or Optional :** Mandatory  
**Number of Questions :** 50  
**Number of Questions to be attempted :** 40  
**Section Marks :** 200  
**Enable Mark as Answered Mark for Review and Clear Response :** Yes  
**Maximum Instruction Time :** 0  
**Sub-Section Number :** 1  
**Sub-Section Id :** 4855842402  
**Question Shuffling Allowed :** No  
**Is Section Default? :** null

**Question Number : 1 Question Id : 48558433166 Question Type : MCQ Option Shuffling : No Is Question Mandatory : No  
Calculator : None Response Time : N.A Think Time : N.A Minimum Instruction Time : 0**

**Correct Marks : 5 Wrong Marks : 1**

**Question Key Details :**

Key	Value
Comprehension	Comp1

Unquestionably a literary life is for the most part an unhappy life; because, if you have genius, you must suffer the penalty of genius; and if you have only talent, there are so many cares and worries incidental to the circumstances of men of letters, as to make life exceedingly miserable. Besides the pangs of composition, and the continuous disappointment which a trues artist feels at his inability to reveal himself, there is the ever-recurring difficulty of gaining the public ear. Young writers are buoyed up by the hope and the belief that they have only to print to be acknowledged at once as a new light in literature. You can never convince a young author that the editors of magazines and the publishers of books are a practical body of men, who are by no means frantically anxious about placing the best literature before the public. Nay, that for the most part they are mere brokers, who conduct their business on the hardest lines of a Profit and Loss account. But supposing your book fairly launches, its perils, are only beginning. You have to run the gauntlet of the critics. To a young author, again, this seems to be as terrible on ordeal as passing down the files of Sioux or Comanche Indians, each one of whom is thirsting for your scalp. When you are a little older, you will find that criticism is not much more serious than the bye-play of clowns in a circus, when they beat around the ring the victim with bladders slung at the end of long poles. A time comes in the life of every author when he regards critics as comical rather than formidable, and goes his way unheeding. But there are sensitive souls that yield under the chastisement and, perhaps after suffering much silent torture, abandon the profession of the pen for ever, Keats, perhaps, is the saddest example of a fine spirit hounded to death by savage criticism; because, whatever his biographers may aver, that furious attack of Gifford and Terry undoubtedly expediated his death. But no doubt there are hundreds who suffer keenly hostile and unscrupulous criticism, and who have to bear that suffering in silence, because it is a cardinal principle in literature that the most unwise thing in the world for an author is to take public notice of criticism in the way of defending himself. Silence is the only safeguard, as it is the only dignified protest against insult and offence.

Why is the literary life mostly an unhappy one?

1. Most people don't understand literary people
2. They have to suffer the penalty of genius
3. Literary life is not about richness
4. They do not get the publishers easily

**Options :**

- 485584132661. 1
- 485584132662. 2
- 485584132663. 3
- 485584132664. 4

**Question Number : 2 Question Id : 48558433167 Question Type : MCQ Option Shuffling : No Is Question Mandatory : No Calculator : None Response Time : N.A Think Time : N.A Minimum Instruction Time : 0**

**Correct Marks : 5 Wrong Marks : 1**

**Question Key Details :**

Key	Value
Comprehension	Comp1

Unquestionably a literary life is for the most part an unhappy life; because, if you have genius, you must suffer the penalty of genius; and if you have only talent, there are so many cares and worries incidental to the circumstances of men of letters, as to make life exceedingly miserable. Besides the pangs of composition, and the continuous disappointment which a trues artist feels at his inability to reveal himself, there is the ever-recurring difficulty of gaining the public ear. Young writers are buoyed up by the hope and the belief that they have only to print to be acknowledged at once as a new light in literature. You can never convince a young author that the editors of magazines and the publishers of books are a practical body of men, who are by no means frantically anxious about placing the best literature before the public. Nay, that for the most part they are mere brokers, who conduct their business on the hardest lines of a Profit and Loss account. But supposing your book fairly launches, its perils, are only beginning. You have to run the gauntlet of the critics. To a young author, again, this seems to be as terrible on ordeal as passing down the files of Sioux or Comanche Indians, each one of whom is thirsting for your scalp. When you are a little older, you will find that criticism is not much more serious than the bye-play of clowns in a circus, when they beat around the ring the victim with bladders slung at the end of long poles. A time comes in the life of every author when he regards critics as comical rather than formidable, and goes his way unheeding. But there are sensitive souls that yield under the chastisement and, perhaps after suffering much silent torture, abandon the profession of the pen for ever, Keats, perhaps, is the saddest example of a fine spirit hounded to death by savage criticism; because, whatever his biographers may aver, that furious attack of Gifford and Terry undoubtedly expediated his death. But no doubt there are hundreds who suffer keenly hostile and unscrupulous criticism, and who have to bear that suffering in silence, because it is a cardinal principle in literature that the most unwise thing in the world for an author is to take public notice of criticism in the way of defending himself. Silence is the only safeguard, as it is the only dignified protest against insult and offence.

What is the ambition of a young author?

1. To create big name in the literary world
2. To achieve name and fame instantly
3. To create a big dent in the knowledge world
4. To dislodge other big names in the literary world

**Options :**

- 485584132665. 1
- 485584132666. 2
- 485584132667. 3
- 485584132668. 4

**Question Number : 3 Question Id : 48558433168 Question Type : MCQ Option Shuffling : No Is Question Mandatory : No Calculator : None Response Time : N.A Think Time : N.A Minimum Instruction Time : 0**

**Correct Marks : 5 Wrong Marks : 1**

**Question Key Details :**

Key	Value
Comprehension	Comp1

Unquestionably a literary life is for the most part an unhappy life; because, if you have genius, you must suffer the penalty of genius; and if you have only talent, there are so many cares and worries incidental to the circumstances of men of letters, as to make life exceedingly miserable. Besides the pangs of composition, and the continuous disappointment which a trues artist feels at his inability to reveal himself, there is the ever-recurring difficulty of gaining the public ear. Young writers are buoyed up by the hope and the belief that they have only to print to be acknowledged at once as a new light in literature. You can never convince a young author that the editors of magazines and the publishers of books are a practical body of men, who are by no means frantically anxious about placing the best literature before the public. Nay, that for the most part they are mere brokers, who conduct their business on the hardest lines of a Profit and Loss account. But supposing your book fairly launches, its perils, are only beginning. You have to run the gauntlet of the critics. To a young author, again, this seems to be as terrible on ordeal as passing down the files of Sioux or Comanche Indians, each one of whom is thirsting for your scalp. When you are a little older, you will find that criticism is not much more serious than the bye-play of clowns in a circus, when they beat around the ring the victim with bladders slung at the end of long poles. A time comes in the life of every author when he regards critics as comical rather than formidable, and goes his way unheeding. But there are sensitive souls that yield under the chastisement and, perhaps after suffering much silent torture, abandon the profession of the pen for ever, Keats, perhaps, is the saddest example of a fine spirit hounded to death by savage criticism; because, whatever his biographers may aver, that furious attack of Gifford and Terry undoubtedly expediated his death. But no doubt there are hundreds who suffer keenly hostile and unscrupulous criticism, and who have to bear that suffering in silence, because it is a cardinal principle in literature that the most unwise thing in the world for an author is to take public notice of criticism in the way of defending himself. Silence is the only safeguard, as it is the only dignified protest against insult and offence.

What is the general response of the editors and publishers towards young authors?

1. They are very sympathetic
2. They are very hostile
3. They are very welcoming
4. They are highly indifferent

**Options :**

- 485584132669. 1
- 485584132670. 2
- 485584132671. 3
- 485584132672. 4

**Question Number : 4 Question Id : 48558433169 Question Type : MCQ Option Shuffling : No Is Question Mandatory : No Calculator : None Response Time : N.A Think Time : N.A Minimum Instruction Time : 0**

**Correct Marks : 5 Wrong Marks : 1**

**Question Key Details :**

Key	Value
Comprehension	Comp1

Unquestionably a literary life is for the most part an unhappy life; because, if you have genius, you must suffer the penalty of genius; and if you have only talent, there are so many cares and worries incidental to the circumstances of men of letters, as to make life exceedingly miserable. Besides the pangs of composition, and the continuous disappointment which a trues artist feels at his inability to reveal himself, there is the ever-recurring difficulty of gaining the public ear. Young writers are buoyed up by the hope and the belief that they have only to print to be acknowledged at once as a new light in literature. You can never convince a young author that the editors of magazines and the publishers of books are a practical body of men, who are by no means frantically anxious about placing the best literature before the public. Nay, that for the most part they are mere brokers, who conduct their business on the hardest lines of a Profit and Loss account. But supposing your book fairly launches, its perils, are only beginning. You have to run the gauntlet of the critics. To a young author, again, this seems to be as terrible on ordeal as passing down the files of Sioux or Comanche Indians, each one of whom is thirsting for your scalp. When you are a little older, you will find that criticism is not much more serious than the bye-play of clowns in a circus, when they beat around the ring the victim with bladders slung at the end of long poles. A time comes in the life of every author when he regards critics as comical rather than formidable, and goes his way unheeding. But there are sensitive souls that yield under the chastisement and, perhaps after suffering much silent torture, abandon the profession of the pen for ever, Keats, perhaps, is the saddest example of a fine spirit hounded to death by savage criticism; because, whatever his biographers may aver, that furious attack of Gifford and Terry undoubtedly expediated his death. But no doubt there are hundreds who suffer keenly hostile and unscrupulous criticism, and who have to bear that suffering in silence, because it is a cardinal principle in literature that the most unwise thing in the world for an author is to take public notice of criticism in the way of defending himself. Silence is the only safeguard, as it is the only dignified protest against insult and offence.

What attitude should an author adopt in the face of bitter critics?

1. All criticism should be accepted nicely.
2. All criticism should be rejected.
3. All criticism should be written about.
4. Silence is the best response.

**Options :**

- 485584132673. 1
- 485584132674. 2
- 485584132675. 3
- 485584132676. 4

**Question Number : 5 Question Id : 48558433170 Question Type : MCQ Option Shuffling : No Is Question Mandatory : No Calculator : None Response Time : N.A Think Time : N.A Minimum Instruction Time : 0**

**Correct Marks : 5 Wrong Marks : 1**

**Question Key Details :**

Key	Value
Comprehension	Comp1

Unquestionably a literary life is for the most part an unhappy life; because, if you have genius, you must suffer the penalty of genius; and if you have only talent, there are so many cares and worries incidental to the circumstances of men of letters, as to make life exceedingly miserable. Besides the pangs of composition, and the continuous disappointment which a trues artist feels at his inability to reveal himself, there is the ever-recurring difficulty of gaining the public ear. Young writers are buoyed up by the hope and the belief that they have only to print to be acknowledged at once as a new light in literature. You can never convince a young author that the editors of magazines and the publishers of books are a practical body of men, who are by no means frantically anxious about placing the best literature before the public. Nay, that for the most part they are mere brokers, who conduct their business on the hardest lines of a Profit and Loss account. But supposing your book fairly launches, its perils, are only beginning. You have to run the gauntlet of the critics. To a young author, again, this seems to be as terrible on ordeal as passing down the files of Sioux or Comanche Indians, each one of whom is thirsting for your scalp. When you are a little older, you will find that criticism is not much more serious than the bye-play of clowns in a circus, when they beat around the ring the victim with bladders slung at the end of long poles. A time comes in the life of every author when he regards critics as comical rather than formidable, and goes his way unheeding. But there are sensitive souls that yield under the chastisement and, perhaps after suffering much silent torture, abandon the profession of the pen for ever, Keats, perhaps, is the saddest example of a fine spirit hounded to death by savage criticism; because, whatever his biographers may aver, that furious attack of Gifford and Terry undoubtedly expediated his death. But no doubt there are hundreds who suffer keenly hostile and unscrupulous criticism, and who have to bear that suffering in silence, because it is a cardinal principle in literature that the most unwise thing in the world for an author is to take public notice of criticism in the way of defending himself. Silence is the only safeguard, as it is the only dignified protest against insult and offence.

Explain "Abandon the profession of pen"

1. Publishing sector
2. literary life
3. Pen-making Industry
4. The world of critics

**Options :**

- 485584132677. 1
- 485584132678. 2
- 485584132679. 3
- 485584132680. 4

**Sub-Section Number :** 2  
**Sub-Section Id :** 4855842403  
**Question Shuffling Allowed :** No  
**Is Section Default? :** null

**Question Number : 6 Question Id : 48558433171 Question Type : MCQ Option Shuffling : No Is Question Mandatory : No Calculator : None Response Time : N.A Think Time : N.A Minimum Instruction Time : 0**

**Correct Marks : 5 Wrong Marks : 1**

**Question Key Details :**

Key	Value
Comprehension	Comp2

Organisms change over time. Some of these changes make no difference to the success or failure of the organism that inherit them; other changes do. Take a group of antelopes in which one individual has longer legs than its siblings. Those longer legs make the individual better at escaping from predators, hence giving it an advantage in the survival stakes. Its descendants inherit this feature and are better able to survive as a consequence. Those longer legs have thus become an 'adaptation' Their evolution means that this particular lineage of ante lopes has adapted to its conditions, thanks to its development of this features. Their evolution means that this particular lineage of ante lopes

Over the generations, the individual components of the genetic code within a species change, or mutate. So far as we know, mutations mny provide no evolutionary advantage at all. They may be disadvantageous, in which case they are weeded out via natural selection; or they may be advantageous, in which case they persist through the generations.

Choose the most appropriate meaning of the given word:

### MUTATION

1. undergo a change in the genetic code
2. transform into another organism
3. a rupture in the organism's growth
4. rapid change in the bone structure of the organism

#### Options :

- 485584132681. 1
- 485584132682. 2
- 485584132683. 3
- 485584132684. 4

**Question Number : 7 Question Id : 48558433172 Question Type : MCQ Option Shuffling : No Is Question Mandatory : No Calculator : None Response Time : N.A Think Time : N.A Minimum Instruction Time : 0**

**Correct Marks : 5 Wrong Marks : 1**

#### Question Key Details :

Key	Value
Comprehension	Comp2

Organisms change over time. Some of these changes make no difference to the success or failure of the organism that inherit them; other changes do. Take a group of antelopes in which one individual has longer legs than its siblings. Those longer legs make the individual better at escaping from predators, hence giving it an advantage in the survival stakes. Its descendants inherit this feature and are better able to survive as a consequence. Those longer legs have thus become an 'adaptation' Their evolution means that this particular lineage of ante lopes has adapted to its conditions, thanks to its development of this features. Their evolution means that this particular lineage of ante lopes

Over the generations, the individual components of the genetic code within a species change, or mutate. So far as we know, mutations mny provide no evolutionary advantage at all. They may be disadvantageous, in which case they are weeded out via natural selection; or they may be advantageous, in which case they persist through the generations.

Choose the most appropriate answer to the following question.  
How have antelopes adopted to get better at escaping from predators?

1. The long legs of the antelopes help them run faster and have become an adaptations
2. Their horns help them defeat predators
3. They have no advantageous mutations
4. They have a keen sense of smell

**Options :**

- 485584132685. 1
- 485584132686. 2
- 485584132687. 3
- 485584132688. 4

**Question Number : 8 Question Id : 48558433173 Question Type : MCQ Option Shuffling : No Is Question Mandatory : No Calculator : None Response Time : N.A Think Time : N.A Minimum Instruction Time : 0**

**Correct Marks : 5 Wrong Marks : 1**

**Question Key Details :**

Key	Value
Comprehension	Comp2

Organisms change over time. Some of these changes make no difference to the success or failure of the organism that inherit them; other changes do. Take a group of antelopes in which one individual has longer legs than its siblings. Those longer legs make the individual better at escaping from predators, hence giving it an advantage in the survival stakes. Its descendants inherit this feature and are better able to survive as a consequence. Those longer legs have thus become an 'adaptation' Their evolution means that this particular lineage of ante lopes has adapted to its conditions, thanks to its development of this features. Their evolution means that this particular lineage of ante lopes

Over the generations, the individual components of the genetic code within a species change, or mutate. So far as we know, mutations mny provide no evolutionary advantage at all. They may be disadvantageous, in which case they are weeded out via natural selection; or they may be advantageous, in which case they persist through the generations.

What happens to disadvantages mutations?

1. they are renewed through natural reduction
2. They persist through the generations
3. They remain an additional burden on the species
4. None of the above

**Options :**

- 485584132689. 1
- 485584132690. 2
- 485584132691. 3
- 485584132692. 4



**Question Number : 9 Question Id : 48558433174 Question Type : MCQ Option Shuffling : No Is Question Mandatory : No Calculator : None Response Time : N.A Think Time : N.A Minimum Instruction Time : 0**

**Correct Marks : 5 Wrong Marks : 1**

**Question Key Details :**

Key	Value
Comprehension	Comp2

Organisms change over time. Some of these changes make no difference to the success or failure of the organism that inherit them; other changes do. Take a group of antelopes in which one individual has longer legs than its siblings. Those longer legs make the individual better at escaping from predators, hence giving it an advantage in the survival stakes. Its descendants inherit this feature and are better able to survive as a consequence. Those longer legs have thus become an 'adaptation' Their evolution means that this particular lineage of ante lopes has adapted to its conditions, thanks to its development of this features. Their evolution means that this particular lineage of ante lopes

Over the generations, the individual components of the genetic code within a species change, or mutate. So far as we know, mutations mny provide no evolutionary advantage at all. They may be disadvantageous, in which case they are weeded out via natural selection; or they may be advantageous, in which case they persist through the generations.

Why do some mutations persist through generations?

1. They are harmful to the animal
2. They make no difference to the animal's survival
3. They are ornamental
4. They are advantageous to the animal

**Options :**

485584132693. 1

485584132694. 2

485584132695. 3

485584132696. 4

**Question Number : 10 Question Id : 48558433175 Question Type : MCQ Option Shuffling : No Is Question Mandatory : No Calculator : None Response Time : N.A Think Time : N.A Minimum Instruction Time : 0**

**Correct Marks : 5 Wrong Marks : 1**

**Question Key Details :**

Key	Value
Comprehension	Comp2

Organisms change over time. Some of these changes make no difference to the success or failure of the organism that inherit them; other changes do. Take a group of antelopes in which one individual has longer legs than its siblings. Those longer legs make the individual better at escaping from predators, hence giving it an advantage in the survival stakes. Its descendants inherit this feature and are better able to survive as a consequence. Those longer legs have thus become an 'adaptation' Their evolution means that this particular lineage of ante lopes has adapted to its conditions, thanks to its development of this features. Their evolution means that this particular lineage of ante lopes

Over the generations, the individual components of the genetic code within a species change, or mutate. So far as we know, mutations mny provide no evolutionary advantage at all. They may be disadvantageous, in which case they are weeded out via natural selection; or they may be advantageous, in which case they persist through the generations.

Choose an appropriate title for the passage from the following options:-

1. Adaptation and Mutation
2. Mutation: A Necessity
3. Genetic Code
4. Survival of the Antelope

**Options :**

- 485584132697. 1
- 485584132698. 2
- 485584132699. 3
- 485584132700. 4

**Sub-Section Number :** 3  
**Sub-Section Id :** 4855842404  
**Question Shuffling Allowed :** No  
**Is Section Default? :** null

**Question Number : 11 Question Id : 48558433176 Question Type : MCQ Option Shuffling : No Is Question Mandatory : No Calculator : None Response Time : N.A Think Time : N.A Minimum Instruction Time : 0**

**Correct Marks : 5 Wrong Marks : 1**

**Question Key Details :**

Key	Value
Comprehension	Comp3

Supposing you have to make a payment of Rs.100, you can do so in rupees-coins; but it would be cumbersome to pay in nickel or copper coins, because they are heavy to carry and also because it takes much time to count them. The government therefore permits you to make the payment in rupee-notes. What are these rupee notes really? They are kind of money, right enough, although they are made of paper instead of metal. You can use them in just the same way that you use ordinary money. The reason why they are made of paper and used is that they save the trouble of carrying metal coins about-of course, paper is lighter than metal-and they also save using silver and other metals when they are scarce.

What makes these mere pieces of of paper bear the value of the number of rupees that is printed upon them? Why should a piece of paper, with "100" printed on it be worth twenty times as much as a piece of paper with "five" printed on it-and also worth a hundred times as much as a silver rupee-coin? The reason is that Government guarantees that the piece of paper is worth the amount printed an it and promised to pay that amount to any body who wishes to exchange this paper for the rupee-coins. Also, if you think about it you can easily realize that crores and crores more of rupee-coins would have to be minted, if all paper-money were abolished.

Perhaps you may ask, "Then why not have paper money only?" Why use silver and Nickle and copper at all? The answer is-because money must, as we have already said, be something so useful that everyone wants. Also because the metals are the best form of money; and thirdly because it would be impossible to print just the right amount of paper money that would keep prices at their proper natural level. If any Government prints too much paper money, then prices go up at once. The supply of money is increased and therefore its value (in food, clothes, books, houses, land, tools and everything else) goes down.

You may think at first that it is queer to talk of having too much paper money and the money is so nice and useful that you cannot have too much of it. But if you think that, I an afraid you are forgetting that money is only useful for what it will buy; so it is no good at all having more money if there are no more things to buy with it. The more money there is , the higher will be the prices of everything. The same thing happens with rupee-coins as with paper money. But it is not likely to happen, for this reason: it is very easy to print a great deal of paper money, but not at all easy to increase the amount there is if it keeps very steady and changes very little. In fact that is one of the chief reasons why it was chosen to make coins of.

The Government allows payment to be made in \_\_\_\_\_

1. nickel
2. rupee coins
3. copper coins
4. rupee notes

**Options :**

- 485584132701. 1
- 485584132702. 2
- 485584132703. 3
- 485584132704. 4

**Question Number : 12 Question Id : 48558433177 Question Type : MCQ Option Shuffling : No Is Question Mandatory : No Calculator : None Response Time : N.A Think Time : N.A Minimum Instruction Time : 0**

**Correct Marks : 5 Wrong Marks : 1**

**Question Key Details :**

Key	Value
Comprehension	Comp3

Supposing you have to make a payment of Rs.100, you can do so in rupees-coins; but it would be cumbersome to pay in nickel or copper coins, because they are heavy to carry and also because it takes much time to count them. The government therefore permits you to make the payment in rupee-notes. What are these rupee notes really? They are kind of money, right enough, although they are made of paper instead of metal. You can use them in just the same way that you use ordinary money. The reason why they are made of paper and used is that they save the trouble of carrying metal coins about-of course, paper is lighter than metal-and they also save using silver and other metals when they are scarce.

What makes these mere pieces of of paper bear the value of the number of rupees that is printed upon them? Why should a piece of paper, with "100" printed on it be worth twenty times as much as a piece of paper with "five" printed on it-and also worth a hundred times as much as a silver rupee-coin? The reason is that Government guarantees that the piece of paper is worth the amount printed an it and promised to pay that amount to any body who wishes to exchange this paper for the rupee-coins. Also, if you think about it you can easily realize that crores and crores more of rupee-coins would have to be minted, if all paper-money were abolished.

Perhaps you may ask, "Then why not have paper money only?" Why use silver and Nickle and copper at all? The answer is-because money must, as we have already said, be something so useful that everyone wants. Also because the metals are the best form of money; and thirdly because it would be impossible to print just the right amount of paper money that would keep prices at their proper natural level. If any Government prints too much paper money, then prices go up at once. The supply of money is increased and therefore its value (in food, clothes, books, houses, land, tools and everything else) goes down.

You may think at first that it is queer to talk of having too much paper money and the money is so nice and useful that you cannot have too much of it. But if you think that, I an afraid you are forgetting that money is only useful for what it will buy; so it is no good at all having more money if there are no more things to buy with it. The more money there is , the higher will be the prices of everything. The same thing happens with rupee-coins as with paper money. But it is not likely to happen, for this reason: it is very easy to print a great deal of paper money, but not at all easy to increase the amount there is if it keeps very steady and changes very little. In fact that is one of the chief reasons why it was chosen to make coins of.

What are these rupee notes made of?

1. coins
2. nickel
3. paper
4. copper coins

**Options :**

- 485584132705. 1
- 485584132706. 2
- 485584132707. 3
- 485584132708. 4

**Question Number : 13 Question Id : 48558433178 Question Type : MCQ Option Shuffling : No Is Question Mandatory : No Calculator : None Response Time : N.A Think Time : N.A Minimum Instruction Time : 0**

**Correct Marks : 5 Wrong Marks : 1**

**Question Key Details :**

Key	Value
Comprehension	Comp3

Supposing you have to make a payment of Rs.100, you can do so in rupees-coins; but it would be cumbersome to pay in nickel or copper coins, because they are heavy to carry and also because it takes much time to count them. The government therefore permits you to make the payment in rupee-notes. What are these rupee notes really? They are kind of money, right enough, although they are made of paper instead of metal. You can use them in just the same way that you use ordinary money. The reason why they are made of paper and used is that they save the trouble of carrying metal coins about-of course, paper is lighter than metal-and they also save using silver and other metals when they are scarce.

What makes these mere pieces of of paper bear the value of the number of rupees that is printed upon them? Why should a piece of paper, with "100" printed on it be worth twenty times as much as a piece of paper with "five" printed on it-and also worth a hundred times as much as a silver rupee-coin? The reason is that Government guarantees that the piece of paper is worth the amount printed an it and promised to pay that amount to any body who wishes to exchange this paper for the rupee-coins. Also, if you think about it you can easily realize that crores and crores more of rupee-coins would have to be minted, if all paper-money were abolished.

Perhaps you may ask, "Then why not have paper money only?" Why use silver and Nickle and copper at all? The answer is-because money must, as we have already said, be something so useful that everyone wants. Also because the metals are the best form of money; and thirdly because it would be impossible to print just the right amount of paper money that would keep prices at their proper natural level. If any Government prints too much paper money, then prices go up at once. The supply of money is increased and therefore its value (in food, clothes, books, houses, land, tools and everything else) goes down.

You may think at first that it is queer to talk of having too much paper money and the money is so nice and useful that you cannot have too much of it. But if you think that, I an afraid you are forgetting that money is only useful for what it will buy; so it is no good at all having more money if there are no more things to buy with it. The more money there is , the higher will be the prices of everything. The same thing happens with rupee-coins as with paper money. But it is not likely to happen, for this reason: it is very easy to print a great deal of paper money, but not at all easy to increase the amount there is if it keeps very steady and changes very little. In fact that is one of the chief reasons why it was chosen to make coins of.

\_\_\_\_\_ are the best form of money

1. paper-notes
2. metals
3. nickel coins
4. copper coins

**Options :**

- 485584132709. 1
- 485584132710. 2
- 485584132711. 3
- 485584132712. 4

**Question Number : 14 Question Id : 48558433179 Question Type : MCQ Option Shuffling : No Is Question Mandatory : No Calculator : None Response Time : N.A Think Time : N.A Minimum Instruction Time : 0**

**Correct Marks : 5 Wrong Marks : 1**

**Question Key Details :**

Key	Value
Comprehension	Comp3

Supposing you have to make a payment of Rs.100, you can do so in rupees-coins; but it would be cumbersome to pay in nickel or copper coins, because they are heavy to carry and also because it takes much time to count them. The government therefore permits you to make the payment in rupee-notes. What are these rupee notes really? They are kind of money, right enough, although they are made of paper instead of metal. You can use them in just the same way that you use ordinary money. The reason why they are made of paper and used is that they save the trouble of carrying metal coins about-of course, paper is lighter than metal-and they also save using silver and other metals when they are scarce.

What makes these mere pieces of of paper bear the value of the number of rupees that is printed upon them? Why should a piece of paper, with "100" printed on it be worth twenty times as much as a piece of paper with "five" printed on it-and also worth a hundred times as much as a silver rupee-coin? The reason is that Government guarantees that the piece of paper is worth the amount printed an it and promised to pay that amount to any body who wishes to exchange this paper for the rupee-coins. Also, if you think about it you can easily realize that crores and crores more of rupee-coins would have to be minted, if all paper-money were abolished.

Perhaps you may ask, "Then why not have paper money only?" Why use silver and Nickle and copper at all? The answer is-because money must, as we have already said, be something so useful that everyone wants. Also because the metals are the best form of money; and thirdly because it would be impossible to print just the right amount of paper money that would keep prices at their proper natural level. It any Government prints too much paper money, then prices go up at once. The supply of money is increased and therefore its value (in food, clothes, books, houses, land, tools and everything else) goes down.

You may think at first that it is queer to talk of having too much paper money and the money is so nice and useful that you cannot have too much of it. But if you think that, I an afraid you are forgetting that money is only useful for what it will buy; so it is no good at all having more money if there are no more things to buy with it. The more money there is , the higher will be the prices of everything. The same thing happens with rupee-coins as with paper money. But it is not likely to happen, for this reason: it is very easy to print a great deal of paper money, but not at all easy to increase the amount there is if it keeps very steady and changes very little. In fact that is one of the chief reasons why it was chosen to make coins of.

If the government prints too much paper money, then prices \_\_\_\_\_ at once

1. go up
2. go down
3. remain stable
4. don't change

**Options :**

- 485584132713. 1
- 485584132714. 2
- 485584132715. 3
- 485584132716. 4

**Question Number : 15 Question Id : 48558433180 Question Type : MCQ Option Shuffling : No Is Question Mandatory : No Calculator : None Response Time : N.A Think Time : N.A Minimum Instruction Time : 0**

**Correct Marks : 5 Wrong Marks : 1**

**Question Key Details :**

Key	Value
Comprehension	Comp3

Supposing you have to make a payment of Rs.100, you can do so in rupees-coins; but it would be cumbersome to pay in nickel or copper coins, because they are heavy to carry and also because it takes much time to count them. The government therefore permits you to make the payment in rupee-notes. What are these rupee notes really? They are kind of money, right enough, although they are made of paper instead of metal. You can use them in just the same way that you use ordinary money. The reason why they are made of paper and used is that they save the trouble of carrying metal coins about-of course, paper is lighter than metal-and they also save using silver and other metals when they are scarce.

What makes these mere pieces of of paper bear the value of the number of rupees that is printed upon them? Why should a piece of paper, with "100" printed on it be worth twenty times as much as a piece of paper with "five" printed on it-and also worth a hundred times as much as a silver rupee-coin? The reason is that Government guarantees that the piece of paper is worth the amount printed an it and promised to pay that amount to any body who wishes to exchange this paper for the rupee-coins. Also, if you think about it you can easily realize that crores and crores more of rupee-coins would have to be minted, if all paper-money were abolished.

Perhaps you may ask, "Then why not have paper money only?" Why use silver and Nickle and copper at all? The answer is-because money must, as we have already said, be something so useful that everyone wants. Also because the metals are the best form of money; and thirdly because it would be impossible to print just the right amount of paper money that would keep prices at their proper natural level. If any Government prints too much paper money, then prices go up at once. The supply of money is increased and therefore its value (in food, clothes, books, houses, land, tools and everything else) goes down.

You may think at first that it is queer to talk of having too much paper money and the money is so nice and useful that you cannot have too much of it. But if you think that, I an afraid you are forgetting that money is only useful for what it will buy; so it is no good at all having more money if there are no more things to buy with it. The more money there is , the higher will be the prices of everything. The same thing happens with rupee-coins as with paper money. But it is not likely to happen, for this reason: it is very easy to print a great deal of paper money, but not at all easy to increase the amount there is if it keeps very steady and changes very little. In fact that is one of the chief reasons why it was chosen to make coins of.

The more money there is \_\_\_\_\_ will be the prices of everything.

1. the lesser
2. the higher
3. the better
4. the worse

**Options :**

- 485584132717. 1
- 485584132718. 2
- 485584132719. 3
- 485584132720. 4

<b>Sub-Section Number :</b>	4
<b>Sub-Section Id :</b>	4855842405
<b>Question Shuffling Allowed :</b>	Yes
<b>Is Section Default? :</b>	null

**Question Number : 16 Question Id : 48558433181 Question Type : MCQ Option Shuffling : No Is Question Mandatory : No Calculator : None Response Time : N.A Think Time : N.A Minimum Instruction Time : 0 Correct Marks : 5 Wrong Marks : 1**

**Question Key Details :**

<b>Key</b>	<b>Value</b>
Comprehension	MCQ

Match List I with List II

Fill in the blanks with appropriate modals from in the sentences given in the list

LIST I		LIST II	
A.	_____ I go now?	I.	shall
B.	We _____ learn swimming	II.	can
C.	You _____ reach home before dark	III.	should
D.	We _____ discuss this matter tomorrow	IV.	ought to

Choose the correct answer from the options given below:

1. A-II, B-III, C-IV, D-I
2. A-I, B-II, C-III, D-IV
3. A-I, B-III, C-IV, D-I
4. A-III, B-IV, C-II, D-I

**Options :**

485584132721. 1  
 485584132722. 2  
 485584132723. 3  
 485584132724. 4

**Question Number : 17 Question Id : 48558433182 Question Type : MCQ Option Shuffling : No Is Question Mandatory : No Calculator : None Response Time : N.A Think Time : N.A Minimum Instruction Time : 0**

**Correct Marks : 5 Wrong Marks : 1**

**Question Key Details :**

<b>Key</b>	<b>Value</b>
Comprehension	MCQ

Fill in the most appropriate modal from the given options

Measles \_\_\_\_\_ be quite dangerous

1. could
2. can
3. should
4. would

**Options :**

485584132725. 1  
 485584132726. 2  
 485584132727. 3  
 485584132728. 4



**Question Number : 18 Question Id : 48558433183 Question Type : MCQ Option Shuffling : No Is Question Mandatory : No Calculator : None Response Time : N.A Think Time : N.A Minimum Instruction Time : 0**

**Correct Marks : 5 Wrong Marks : 1**

**Question Key Details :**

Key	Value
Comprehension	MCQ

Spot the error in the following sentence

1. It is often said that
2. some men are born great
3. some achieve greatness and
4. some had greatness threst on them

**Options :**

- 485584132729. 1
- 485584132730. 2
- 485584132731. 3
- 485584132732. 4

**Question Number : 19 Question Id : 48558433184 Question Type : MCQ Option Shuffling : No Is Question Mandatory : No Calculator : None Response Time : N.A Think Time : N.A Minimum Instruction Time : 0**

**Correct Marks : 5 Wrong Marks : 1**

**Question Key Details :**

Key	Value
Comprehension	MCQ

Change the voice of the following sentence from active to passive:

"I opened the window"

Choose the most appropriate option:

1. I was the one who opened option the window
2. The window was opened and I did it.
3. The window was by I.
4. The window was opened by me.

**Options :**

- 485584132733. 1
- 485584132734. 2
- 485584132735. 3
- 485584132736. 4

**Question Number : 20 Question Id : 48558433185 Question Type : MCQ Option Shuffling : No Is Question Mandatory : No Calculator : None Response Time : N.A Think Time : N.A Minimum Instruction Time : 0**

**Correct Marks : 5 Wrong Marks : 1**

**Question Key Details :**

Key	Value
Comprehension	MCQ

Change the voice of the following sentence from the passive to Active

"The essay was edited by the professor."

1. The professor found the essay and edited it.
2. The professor edited the essay.
3. The professor edited something which was the essay.
4. The professor was edited by the essay.

**Options :**

- 485584132737. 1
- 485584132738. 2
- 485584132739. 3
- 485584132740. 4

**Question Number : 21 Question Id : 48558433186 Question Type : MCQ Option Shuffling : No Is Question Mandatory : No Calculator : None Response Time : N.A Think Time : N.A Minimum Instruction Time : 0**

**Correct Marks : 5 Wrong Marks : 1**

**Question Key Details :**

Key	Value
Comprehension	MCQ

Choose the most appropriate meaning of the following foreign word: "nom de plume"

1. Plumage of a bird
2. Last resort
3. Pen-name
4. Method of operating

**Options :**

- 485584132741. 1
- 485584132742. 2
- 485584132743. 3
- 485584132744. 4

**Question Number : 22 Question Id : 48558433187 Question Type : MCQ Option Shuffling : No Is Question Mandatory : No Calculator : None Response Time : N.A Think Time : N.A Minimum Instruction Time : 0**

**Correct Marks : 5 Wrong Marks : 1**

**Question Key Details :**

Key	Value
Comprehension	MCQ

Match the words in List I with their meanings in List II

LIST I		LIST II	
A.	Mandate	I.	reward
B.	recompense	II.	comfort in time of distress
C.	Solace	III.	an official order to do something
D.	Tatters	IV.	torn pieces of cloth or paper

Choose the correct answer from the options given below:

1. A-I, B-II, C-IV, D-III
2. A-II, B-III, C-I, D-IV
3. A-III, B-I, C-II, D-IV
4. A-IV, B-III, C-II, D-I

**Options :**

485584132745. 1  
485584132746. 2  
485584132747. 3  
485584132748. 4

**Question Number : 23 Question Id : 48558433188 Question Type : MCQ Option Shuffling : No Is Question Mandatory : No Calculator : None Response Time : N.A Think Time : N.A Minimum Instruction Time : 0**

**Correct Marks : 5 Wrong Marks : 1**

**Question Key Details :**

Key	Value
Comprehension	MCQ

Choose the most appropriate meaning of the following foreign word: "Papier mache"

1. Paper mixed with glue
2. Paper mixed with metal
3. Paper mixed with soil
4. Paper mixed with charcoal

**Options :**

485584132749. 1  
485584132750. 2  
485584132751. 3  
485584132752. 4

**Question Number : 24 Question Id : 48558433189 Question Type : MCQ Option Shuffling : No Is Question Mandatory : No Calculator : None Response Time : N.A Think Time : N.A Minimum Instruction Time : 0**

**Correct Marks : 5 Wrong Marks : 1**

**Question Key Details :**

Key	Value
Comprehension	MCQ

Change the following sentence from Direct speech to Indirect Speech:  
The coach promised, " If you will come before school tomorrow, I will teach it,"

Choose appropriate option.

1. The coach promised to meet me after school and teach it.
2. The coach promised that if came before school the next day, he would teach it to me.
3. The coach promised to come before school and teach it to me.
4. The coach promised that I will be thought before school if I came

**Options :**

- 485584132753. 1
- 485584132754. 2
- 485584132755. 3
- 485584132756. 4

**Question Number : 25 Question Id : 48558433190 Question Type : MCQ Option Shuffling : No Is Question Mandatory : No Calculator : None Response Time : N.A Think Time : N.A Minimum Instruction Time : 0**

**Correct Marks : 5 Wrong Marks : 1**

**Question Key Details :**

Key	Value
Comprehension	MCQ

Change the following sentence from Indirect speech to Direct Speech.

She said, "Bravo! You did better than last time"

Choose the most appropriate option:

1. She applauded him, saying that he had done better than last time.
2. She said bravo to him and pointed out that he had done better than last time.
3. She was happy that he had done better than last time.
4. She could not believe that he had done better than last time and said bravo to him.

**Options :**

- 485584132757. 1
- 485584132758. 2
- 485584132759. 3
- 485584132760. 4

**Question Number : 26 Question Id : 48558433191 Question Type : MCQ Option Shuffling : No Is Question Mandatory : No Calculator : None Response Time : N.A Think Time : N.A Minimum Instruction Time : 0**

**Correct Marks : 5 Wrong Marks : 1**

**Question Key Details :**

Key	Value
Comprehension	MCQ

Choose the most appropriate synonym for the following word: "Alarm"

1. Foresee
2. Sleep
3. Awake
4. Shock

**Options :**

485584132761. 1  
485584132762. 2  
485584132763. 3  
485584132764. 4

**Question Number : 27 Question Id : 48558433192 Question Type : MCQ Option Shuffling : No Is Question Mandatory : No Calculator : None Response Time : N.A Think Time : N.A Minimum Instruction Time : 0**

**Correct Marks : 5 Wrong Marks : 1**

**Question Key Details :**

Key	Value
Comprehension	MCQ

Choose the best option to convert the given exclamatory sentence is to Assertive sentence:-

How stupid of me to forget your name!

1. It is stupid of me to forget your name
2. I wonder how can I be stupid to forget your name
3. I can never be stupid to forget your name
4. Forgetting your name is my stupid behaviour

**Options :**

485584132765. 1  
485584132766. 2  
485584132767. 3  
485584132768. 4

**Question Number : 28 Question Id : 48558433193 Question Type : MCQ Option Shuffling : No Is Question Mandatory : No Calculator : None Response Time : N.A Think Time : N.A Minimum Instruction Time : 0**

**Correct Marks : 5 Wrong Marks : 1**

**Question Key Details :**

Key	Value
Comprehension	MCQ

Choose the best option to convert the given assertive sentence in to exclamatory sentence:-

I wish I knew more people here

1. If only I knew more people here!
2. Oh! I knew more people here.
3. What a pity to have known more people here!
4. Alas! I could have known more people here.

**Options :**

- 485584132769. 1
- 485584132770. 2
- 485584132771. 3
- 485584132772. 4

**Question Number : 29 Question Id : 48558433194 Question Type : MCQ Option Shuffling : No Is Question Mandatory : No Calculator : None Response Time : N.A Think Time : N.A Minimum Instruction Time : 0**

**Correct Marks : 5 Wrong Marks : 1**

**Question Key Details :**

Key	Value
Comprehension	MCQ

Match List I with List II

Fill in appropriate modals from list II in The sentences in List I.

LIST I		LIST II	
A.	No one _____ question the ways of God.	I.	Could
B.	How _____ you should at your parents?	II.	Would
C.	_____ you like to have breakfast with me?	III.	can
D.	We ____ respect our elders	IV.	ought to

Choose the correct answer from the options given below:

1. A-I, B-II, C-III, D-IV
2. A-II, B-III, C-I, D-IV
3. A-III, B-I, C-II, D-IV
4. A-IV, B-III, C-I, D-II

**Options :**

- 485584132773. 1
- 485584132774. 2
- 485584132775. 3
- 485584132776. 4

**Question Number : 30 Question Id : 48558433195 Question Type : MCQ Option Shuffling : No Is Question Mandatory : No Calculator : None Response Time : N.A Think Time : N.A Minimum Instruction Time : 0**

**Correct Marks : 5 Wrong Marks : 1**

**Question Key Details :**

Key	Value
Comprehension	MCQ

Fill in correct modals in the given sentence from the given options:-

I wish I \_\_\_\_\_ help you, but I have no money.

1. may
2. could
3. might
4. can

**Options :**

- 485584132777. 1
- 485584132778. 2
- 485584132779. 3
- 485584132780. 4

**Question Number : 31 Question Id : 48558433196 Question Type : MCQ Option Shuffling : No Is Question Mandatory : No Calculator : None Response Time : N.A Think Time : N.A Minimum Instruction Time : 0**

**Correct Marks : 5 Wrong Marks : 1**

**Question Key Details :**

Key	Value
Comprehension	MCQ

Which of the following is an appropriate subscription for a formal letter?

Choose from the options given below:

1. Yours sincerely
2. Yours lovingly
3. Yours forever
4. Your dear friend

**Options :**

- 485584132781. 1
- 485584132782. 2
- 485584132783. 3
- 485584132784. 4

**Question Number : 32 Question Id : 48558433197 Question Type : MCQ Option Shuffling : No Is Question Mandatory : No Calculator : None Response Time : N.A Think Time : N.A Minimum Instruction Time : 0**

**Correct Marks : 5 Wrong Marks : 1**

**Question Key Details :**

Key	Value
Comprehension	MCQ

Which of the following elements are Not found in informal letters?

Choose from the options given below:

1. Signature
2. Date
3. Salutation or Courteous greeting
4. Subject

**Options :**

- 485584132785. 1
- 485584132786. 2
- 485584132787. 3
- 485584132788. 4

**Question Number : 33 Question Id : 48558433198 Question Type : MCQ Option Shuffling : No Is Question Mandatory : No Calculator : None Response Time : N.A Think Time : N.A Minimum Instruction Time : 0**

**Correct Marks : 5 Wrong Marks : 1**

**Question Key Details :**

Key	Value
Comprehension	MCQ

Which of the following pair of words are not homonyms:

1. cite, site
2. pallet, palate
3. burn, burden
4. hear, here

**Options :**

- 485584132789. 1
- 485584132790. 2
- 485584132791. 3
- 485584132792. 4

**Question Number : 34 Question Id : 48558433199 Question Type : MCQ Option Shuffling : No Is Question Mandatory : No Calculator : None Response Time : N.A Think Time : N.A Minimum Instruction Time : 0**

**Correct Marks : 5 Wrong Marks : 1**

**Question Key Details :**

Key	Value
Comprehension	MCQ



Rearrange the following jumbled phrases into a coherent sentence

- A. A given trait whenever they are present
- B. Among heterogenous organisms,
- C. Meaning that they result in the expression of
- D. Some adults are dominant

- 1. ACDB
- 2. BDCA
- 3. DACB
- 4. CDAB

**Options :**

- 485584132793. 1
- 485584132794. 2
- 485584132795. 3
- 485584132796. 4

**Question Number : 35 Question Id : 48558433200 Question Type : MCQ Option Shuffling : No Is Question Mandatory : No Calculator : None Response Time : N.A Think Time : N.A Minimum Instruction Time : 0**

**Correct Marks : 5 Wrong Marks : 1**

**Question Key Details :**

Key	Value
Comprehension	MCQ

Rearrange the following jumbled phrases into a coherent sentence

- A. as Annu is senior than Susan
- B. though Susan had worked there before Annu
- C. Annu received the promotion instead of Susan
- D. in age

- 1. ABCD
- 2. DBAC
- 3. CADB
- 4. BACD

**Options :**

- 485584132797. 1
- 485584132798. 2
- 485584132799. 3
- 485584132800. 4

**Question Number : 36 Question Id : 48558433201 Question Type : MCQ Option Shuffling : No Is Question Mandatory : No Calculator : None Response Time : N.A Think Time : N.A Minimum Instruction Time : 0**

**Correct Marks : 5 Wrong Marks : 1**

**Question Key Details :**

Key	Value
Comprehension	MCQ

The given sentence is divided into three parts. Scan it carefully for errors and choose the most appropriate options

A) I found less | B) books in the| C) library than that

1. A only
2. B and C
3. C only
4. No error

**Options :**

- 485584132801. 1
- 485584132802. 2
- 485584132803. 3
- 485584132804. 4

**Question Number : 37 Question Id : 48558433202 Question Type : MCQ Option Shuffling : No Is Question Mandatory : No Calculator : None Response Time : N.A Think Time : N.A Minimum Instruction Time : 0**

**Correct Marks : 5 Wrong Marks : 1**

**Question Key Details :**

Key	Value
Comprehension	MCQ

The given sentence is divided into tissue parts. scan it carefully for errors and choose the most appropriate options

- A) Few persons
- B) are free
- C) from worries

1. A only
2. A and C
3. C only
4. No errors

**Options :**

- 485584132805. 1
- 485584132806. 2
- 485584132807. 3
- 485584132808. 4

**Question Number : 38 Question Id : 48558433203 Question Type : MCQ Option Shuffling : No Is Question Mandatory : No Calculator : None Response Time : N.A Think Time : N.A Minimum Instruction Time : 0**

**Correct Marks : 5 Wrong Marks : 1**

**Question Key Details :**

Key	Value
Comprehension	MCQ

Identify the option that demonstrates the most appropriate usage of an adjective clause.

1. She is senior and most intelligent than her friend.
2. Meera adopted a Two-years- old girl.
3. This tree is to big as the other tree.
4. She took a six-week course.

**Options :**

- 485584132809. 1
- 485584132810. 2
- 485584132811. 3
- 485584132812. 4

**Question Number : 39 Question Id : 48558433204 Question Type : MCQ Option Shuffling : No Is Question Mandatory : No Calculator : None Response Time : N.A Think Time : N.A Minimum Instruction Time : 0**

**Correct Marks : 5 Wrong Marks : 1**

**Question Key Details :**

Key	Value
Comprehension	MCQ

Choose the options which demonstrates an appropriate usage of articles.

1. She would make a better statesman than philosopher
2. She would make better statesman than philosopher
3. She would make a better statesman than a philosopher
4. She would makes better statesman than a philosopher

**Options :**

- 485584132813. 1
- 485584132814. 2
- 485584132815. 3
- 485584132816. 4

**Question Number : 40 Question Id : 48558433205 Question Type : MCQ Option Shuffling : No Is Question Mandatory : No Calculator : None Response Time : N.A Think Time : N.A Minimum Instruction Time : 0**

**Correct Marks : 5 Wrong Marks : 1**

**Question Key Details :**

Key	Value
Comprehension	MCQ

Which of the following sentences demonstrate appropriate use(s) of asterisks

1. The third and fourth chapter will be tested in exam
2. The third and fourth chapters will be tested in the exam
3. Third and fourth chapter will be tested in the exam
4. The third and fourth chapters will be tested in the exam

**Options :**

- 485584132817. 1
- 485584132818. 2
- 485584132819. 3
- 485584132820. 4

**Question Number : 41 Question Id : 48558433206 Question Type : MCQ Option Shuffling : No Is Question Mandatory : No Calculator : None Response Time : N.A Think Time : N.A Minimum Instruction Time : 0**

**Correct Marks : 5 Wrong Marks : 1**

**Question Key Details :**

Key	Value
Comprehension	MCQ

Fill in the blanks with the most appropriate adverbs.

Does she sing well? \_\_\_\_\_ she does

1. Yes
2. of course
3. I think
4. Certainly

**Options :**

- 485584132821. 1
- 485584132822. 2
- 485584132823. 3
- 485584132824. 4

**Question Number : 42 Question Id : 48558433207 Question Type : MCQ Option Shuffling : No Is Question Mandatory : No Calculator : None Response Time : N.A Think Time : N.A Minimum Instruction Time : 0**

**Correct Marks : 5 Wrong Marks : 1**

**Question Key Details :**

Key	Value
Comprehension	MCQ

Read the following sentence care. Some part of the sentence may have an error. Choose the most appropriate options.

Mumbai (A) | is New York (B) | of India (c)

1. A
2. B
3. C
4. No error

**Options :**

485584132825. 1  
485584132826. 2  
485584132827. 3  
485584132828. 4

**Question Number : 43 Question Id : 48558433208 Question Type : MCQ Option Shuffling : No Is Question Mandatory : No Calculator : None Response Time : N.A Think Time : N.A Minimum Instruction Time : 0**

**Correct Marks : 5 Wrong Marks : 1**

**Question Key Details :**

Key	Value
Comprehension	MCQ

Match List I with List II

LIST I		LIST II	
A.	Wherefore	I.	adverb of reason
B.	seriously	II.	adverb of degree
C.	probably	III.	interrogative adverb
D.	consequently	IV.	adverb of affirmation

Choose the correct answer from the options given below:

1. A-IV, B-III, C-II, D-I
2. A-III, B-I, C-IV, D-II
3. A-III, B-II, C-IV, D-I
4. A-I, B-II, C-IV, D-IV

**Options :**

485584132829. 1  
485584132830. 2  
485584132831. 3  
485584132832. 4

**Question Number : 44 Question Id : 48558433209 Question Type : MCQ Option Shuffling : No Is Question Mandatory : No Calculator : None Response Time : N.A Think Time : N.A Minimum Instruction Time : 0**

**Correct Marks : 5 Wrong Marks : 1**

**Question Key Details :**

Key	Value
Comprehension	MCQ

Rearrange the following sentences to form a coherent paragraph

- A. Because, if the manager's subordinates are inefficient and ineffective and are not helped to increase their efficiency and effectiveness, the task may not be achieved.
- B. This may be just as true as the responsibility for achieving prescribed tasks.
- C. If it is achieved at too great a cost, or at the risk of other effects many of which are less obvious.
- D. It is often said that one of the prime responsibilities of a manager is the training and development of staff

- 1. CBAD
- 2. DBAC
- 3. DCAB
- 4. CDAB

**Options :**

- 485584132833. 1
- 485584132834. 2
- 485584132835. 3
- 485584132836. 4

**Question Number : 45 Question Id : 48558433210 Question Type : MCQ Option Shuffling : No Is Question Mandatory : No Calculator : None Response Time : N.A Think Time : N.A Minimum Instruction Time : 0**

**Correct Marks : 5 Wrong Marks : 1**

**Question Key Details :**

Key	Value
Comprehension	MCQ

Choose the most appropriate antonym of the given word: UPROARIOUS

- 1. calm
- 2. Tumultuous
- 3. bleating
- 4. upright

**Options :**

- 485584132837. 1
- 485584132838. 2
- 485584132839. 3
- 485584132840. 4

**Question Number : 46 Question Id : 48558433211 Question Type : MCQ Option Shuffling : No Is Question Mandatory : No Calculator : None Response Time : N.A Think Time : N.A Minimum Instruction Time : 0**

**Correct Marks : 5 Wrong Marks : 1**

**Question Key Details :**

Key	Value
-----	-------

Match List I with List II Antonyms

LIST I		LIST II	
A.	luminous	I.	initially
B.	eventually	II.	supercilious
C.	subservient	III.	unholy
D.	sacrosant	IV.	dark

Choose the correct answer from the options given below:

1. A-IV, B-III, C-II, D-I
2. A-III, B-II, C-I, D-IV
3. A-IV, B-I, C-II, D-III
4. A-I, B-III, C-II, D-IV

**Options :**

485584132841. 1  
 485584132842. 2  
 485584132843. 3  
 485584132844. 4

**Question Number : 47 Question Id : 48558433212 Question Type : MCQ Option Shuffling : No Is Question Mandatory : No Calculator : None Response Time : N.A Think Time : N.A Minimum Instruction Time : 0**

**Correct Marks : 5 Wrong Marks : 1**

**Question Key Details :**

Key	Value
Comprehension	MCQ

Fill in the blanks with the most appropriate prepositions

I prefer tea \_\_\_\_\_ coffee

1. with
2. to
3. over
4. of

**Options :**

485584132845. 1  
 485584132846. 2  
 485584132847. 3  
 485584132848. 4

**Question Number : 48 Question Id : 48558433213 Question Type : MCQ Option Shuffling : No Is Question Mandatory : No Calculator : None Response Time : N.A Think Time : N.A Minimum Instruction Time : 0**

**Correct Marks : 5 Wrong Marks : 1**

**Question Key Details :**

Key	Value
Comprehension	MCQ

The soldiers were \_\_\_\_\_ war

1. at
2. in
3. on
4. of

**Options :**

485584132849. 1  
 485584132850. 2  
 485584132851. 3  
 485584132852. 4

**Question Number : 49 Question Id : 48558433214 Question Type : MCQ Option Shuffling : No Is Question Mandatory : No Calculator : None Response Time : N.A Think Time : N.A Minimum Instruction Time : 0**

**Correct Marks : 5 Wrong Marks : 1**

**Question Key Details :**

Key	Value
Comprehension	MCQ

Match the phrasal words with most appropriate meaning

LIST I		LIST II	
A.	draw up	I.	make someone sad or depressed
B.	drag out	II.	prepare and write something
C.	drag down	III.	use a resource to do something
D.	draw on	IV.	make something longer than necessary

Choose the correct answer from the options given below:

1. A-II, B-IV, C-I, D-III
2. A-I, B-II, C-III, D-IV
3. A-II, B-IV, C-III, D-I
4. A-I, B-II, C-IV, D-III

**Options :**

485584132853. 1  
 485584132854. 2  
 485584132855. 3  
 485584132856. 4

**Question Number : 50 Question Id : 48558433215 Question Type : MCQ Option Shuffling : No Is Question Mandatory : No Calculator : None Response Time : N.A Think Time : N.A Minimum Instruction Time : 0**

**Correct Marks : 5 Wrong Marks : 1**



**Question Key Details :**

Key	Value
Comprehension	MCQ

Match the idioms with most appropriate meaning

LIST I		LIST II	
A.	fish out of water	I.	good luck
B.	break a leg	II.	someone about whom very little is known
C.	leave in the lurch	III.	to be put in an unfamiliar situation
D.	dark horse	IV.	abandon someone in a difficult situation

Choose the correct answer from the options given below:

1. A-III, B-IV, C-II, D-I
2. A-III, B-I, C-IV, D-II
3. A-I, B-III, C-IV, D-II
4. A-II, B-I, C-I, D-IV

**Options :**

485584132857. 1  
485584132858. 2  
485584132859. 3  
485584132860. 4

**Hindi**

<b>Group Number :</b>	2
<b>Group Id :</b>	485584740
<b>Group Maximum Duration :</b>	45
<b>Group Minimum Duration :</b>	45
<b>Show Attended Group? :</b>	No
<b>Edit Attended Group? :</b>	No
<b>Break time :</b>	0
<b>Group Marks :</b>	200
<b>Is this Group for Examiner? :</b>	No
<b>Examiner permission :</b>	Cant View
<b>Show Progress Bar? :</b>	No

**Hindi**

<b>Section Id :</b>	485584854
<b>Section Number :</b>	1
<b>Section type :</b>	Online
<b>Mandatory or Optional :</b>	Mandatory
<b>Number of Questions :</b>	50
<b>Number of Questions to be attempted :</b>	40
<b>Section Marks :</b>	200
<b>Enable Mark as Answered Mark for Review and Clear Response :</b>	Yes

<b>Maximum Instruction Time :</b>	0
<b>Sub-Section Number :</b>	1
<b>Sub-Section Id :</b>	4855842406
<b>Question Shuffling Allowed :</b>	No
<b>Is Section Default? :</b>	null
<b>Sub-Section Number :</b>	2
<b>Sub-Section Id :</b>	4855842407
<b>Question Shuffling Allowed :</b>	No
<b>Is Section Default? :</b>	null
<b>Sub-Section Number :</b>	3
<b>Sub-Section Id :</b>	4855842408
<b>Question Shuffling Allowed :</b>	No
<b>Is Section Default? :</b>	null
<b>Sub-Section Number :</b>	4
<b>Sub-Section Id :</b>	4855842409
<b>Question Shuffling Allowed :</b>	Yes
<b>Is Section Default? :</b>	null

### Assamese

<b>Group Number :</b>	3
<b>Group Id :</b>	485584741
<b>Group Maximum Duration :</b>	45
<b>Group Minimum Duration :</b>	45
<b>Show Attended Group? :</b>	No
<b>Edit Attended Group? :</b>	No
<b>Break time :</b>	0
<b>Group Marks :</b>	200
<b>Is this Group for Examiner? :</b>	No
<b>Examiner permission :</b>	Cant View
<b>Show Progress Bar? :</b>	No

### Assamese

<b>Section Id :</b>	485584855
<b>Section Number :</b>	1
<b>Section type :</b>	Online
<b>Mandatory or Optional :</b>	Mandatory
<b>Number of Questions :</b>	50
<b>Number of Questions to be attempted :</b>	40
<b>Section Marks :</b>	200
<b>Enable Mark as Answered Mark for Review and Clear Response :</b>	Yes
<b>Maximum Instruction Time :</b>	0
<b>Sub-Section Number :</b>	1
<b>Sub-Section Id :</b>	4855842410
<b>Question Shuffling Allowed :</b>	No
<b>Is Section Default? :</b>	null
<b>Sub-Section Number :</b>	2
<b>Sub-Section Id :</b>	4855842411
<b>Question Shuffling Allowed :</b>	No
<b>Is Section Default? :</b>	null
<b>Sub-Section Number :</b>	3

**Sub-Section Id :** 4855842412  
**Question Shuffling Allowed :** No  
**Is Section Default? :** null  
**Sub-Section Number :** 4  
**Sub-Section Id :** 4855842413  
**Question Shuffling Allowed :** Yes  
**Is Section Default? :** null

## Kannada

**Group Number :** 4  
**Group Id :** 485584742  
**Group Maximum Duration :** 45  
**Group Minimum Duration :** 45  
**Show Attended Group? :** No  
**Edit Attended Group? :** No  
**Break time :** 0  
**Group Marks :** 200  
**Is this Group for Examiner? :** No  
**Examiner permission :** Cant View  
**Show Progress Bar? :** No

## Kannada

**Section Id :** 485584856  
**Section Number :** 1  
**Section type :** Online  
**Mandatory or Optional :** Mandatory  
**Number of Questions :** 50  
**Number of Questions to be attempted :** 40  
**Section Marks :** 200  
**Enable Mark as Answered Mark for Review and Clear Response :** Yes  
**Maximum Instruction Time :** 0  
**Sub-Section Number :** 1  
**Sub-Section Id :** 4855842414  
**Question Shuffling Allowed :** No  
**Is Section Default? :** null

**Question Number : 51 Question Id : 48558433416 Question Type : MCQ Option Shuffling : No Is Question Mandatory : No Calculator : None Response Time : N.A Think Time : N.A Minimum Instruction Time : 0 Correct Marks : 5 Wrong Marks : 1**

**Question Key Details :**

Key	Value
Comprehension	Comp1

ಕೊಟ್ಟಿರುವ ವಾಕ್ಯ ಸಮಚ್ಛಯದಿಂದ ಆಯ್ದು ಕೆಲಗಿನ ಪ್ರಶ್ನೆಗಳಿಗೆ ಸರಿಯಾದ ಉತ್ತರವನ್ನು ಆಯ್ದು ಮಾಡಿ ಬರೆಯಿರಿ:

1924ನೇ ಜುಲೈ 2ನೇ ತಾರೀಖು ಬುಧವಾರದ ದಿನ ನನ್ನ ಜೀವನದಲ್ಲಿ - ವಿಶೇಷವಾಗಿ ಸಾಹಿತ್ಯ ಸಂಬಂಧವಾದ ಜೀವನದಲ್ಲಿ - ಒಂದು ಸ್ಮರಣೀಯವಾದ ದಿನ. ಮಹಾರಾಜ ಹೈಸ್ಕೂಲಿನ ಇತಿಹಾಸದ ಅಧ್ಯಾಪಕರಾಗಿದ್ದ ಎಂ.ಎಚ್. ಕೃಷ್ಣ ಅಯ್ಯಂಗಾರ್ಯರನ್ನು ಅವರ ಆಹ್ವಾನದ ಮೇರೆಗೆ ಹೋಗಿ ಕಂಡೆ. ಅನೇಕ ಪ್ರೋತ್ಸಾಹದ ಮಾತುಕತೆ ನಡೆದ ಮೇಲೆ, ಅವರು ವಿಶ್ವವಿದ್ಯಾಲಯಕ್ಕೆ ವಿಶೇಷ ಉಪನ್ಯಾಸಗಳನ್ನು ಕೊಡಲು ಬಂದಿದ್ದ ಐರಿಷ್ ಕವಿ ಜೇಮ್ಸ್ ಎಚ್. ಕಸಿನ್ಸ್ ಅವರ ವಿಚಾರ ತಿಳಿಸಿ, ಅವರನ್ನು ಕಂಡು ಅವರಿಗೆ ನನ್ನ ಕವನಗಳನ್ನು ತೋರಿಸುವಂತೆ ಹೇಳಿದರು.

ಶ್ರೀಯುತ ಕಸಿನ್ಸ್ ಅವರು ಇಳಿದುಕೊಂಡಿದ್ದ ಗೌರ್ನಮೆಂಟ್ ಗೆಸ್ಟ್ ಹೌಸಿಗೆ ಹೋದವು ನಾನೂ ನನ್ನೊಬ್ಬ ಸ್ನೇಹಿತರು. ಸ್ವಲ್ಪ ಏಕಾಂತವಾಗಿತ್ತು. ಉದ್ಯಾನ ಸೌಂದರ್ಯದ ಮಧ್ಯೆ ಗ್ರಾಮೀಣ ಮನಸ್ಸಿಗೆ ಗಾಬರಿ ಹುಟ್ಟಿಸುವ ಮಟ್ಟಿಗೆ ಭವ್ಯವಾಗಿತ್ತು ಆ ಕಟ್ಟಡ, ಅದರ ಶಿಸ್ತು. ಒಬ್ಬ ಅನುಚರ ನೌಕರ ಬಂದು ನಮ್ಮನ್ನು ಹೊರಗೆ ಇದ್ದ ಸೋಫಾದ ಮೇಲೆ ಕೂರಿಸಿ, ನನ್ನ ಹೆಸರು ಬರೆದುಕೊಟ್ಟ ಚೀಟಿಯನ್ನು ತೆಗೆದುಕೊಂಡು ಒಳಗೆ ಹೋದನು. ಬಹಳ ಹೊತ್ತು ಅವನು ಹೊರಗೆ ಬರಲಿಲ್ಲ. ನಾವಿಬ್ಬರೂ ಸಣ್ಣ ದನಿಯಲ್ಲಿ ಮಾತಾಡಿಕೊಳ್ಳುತ್ತಾ ಕಾದೆವು. ಬಹಳ ಹೊತ್ತಿನ ಮೇಲೆ ಅನುಚರ ಬಂದು ನನ್ನನ್ನು ಒಳಗೆ ಕರೆದೊಯ್ದು ಕಸಿನ್ಸ್ ಅವರು ಕುಳಿತಿದ್ದ ಸ್ವಲ್ಪ ನಿರ್ದೇಶನ ಮಾಡಿ ಹೊರಗೆ ಹೋದ. ನಾನು ಮುಂಬಂದು ಕಸಿನ್ಸ್ ಅವರ ಸಮೀಪದಲ್ಲಿಯೇ ಮತ್ತೊಂದು ಸೋಫಾದ ಮೇಲೆ ಕುಳಿತೆ. ನಮಸ್ಕಾರಾದಿಗಳ ನಂತರ, ನಾನು ಏತಕ್ಕೆ ಬಂದೆ, ಯಾರ ಸಲಹೆಯ ಮೇರೆಗೆ ಎಂಬುದನ್ನು ಹೇಳಿ ನನ್ನ ಕೈಲಿದ್ದ ಹಸ್ತಪ್ರತಿಯನ್ನು ಅವರಿಗೆ ಕೊಟ್ಟೆ. ಅವರು ಸ್ವಲ್ಪ ಹೊತ್ತು ಹಾಳೆಗಳನ್ನು ಮಗುಚಿ ಮಗುಚಿ ನೋಡಿದರು. ಮತ್ತೆ ತಲೆಯೆತ್ತಿ ನನ್ನನ್ನು ಆಪಾರಮಸ್ತಕ ನೋಡಿದರು. ನಾನು ಸ್ವದೇಶೀ ಚಳುವಳಿಯಲ್ಲಿ ಅಂಗಿ ಟೋಪಿಗಳನ್ನು ಬೆಂಕಿಗೆ ಎಸೆದಂದಿನಿಂದ ಖಾದಿ ಬಟ್ಟೆಯನ್ನೇ ಉಪಯೋಗಿಸುತ್ತಿದ್ದೆ; ಖಾದಿ ಟೋಪಿ, ಖಾದಿ ಷರಟು, ಖಾದಿ ಪಂಚೆ.

ಕಸಿನ್ಸ್ ಸ್ವಲ್ಪ ಅಸಮಾಧಾನದ ಧ್ವನಿಯಿಂದಲೇ ಮಾತನಾಡಿದರು. “ಏನಿದೆಲ್ಲ ಕಗ್ಗ? ನಿಮ್ಮ ಮೈಮೇಲೆ ನೋಡಿದರೆ ತಲೆಯಿಂದ ಕಾಲಿನವರೆಗೂ ಸ್ವದೇಶೀ ವಸ್ತುಗಳೇ ಕಾಣುತ್ತವೆ. ಇದು ಮಾತ್ರ ಸ್ವದೇಶಿಯಲ್ಲ. ನಿಮ್ಮ ಭಾಷೆಯಲ್ಲಿ ಏನಾದರೂ ಬರೆದಿದ್ದೀರಾ?”

ಕೃಷ್ಣ ಅಯ್ಯಂಗಾರರು ಯಾವ ಕೆಲಸವನ್ನು ನಿರ್ವಹಿಸುತ್ತಿದ್ದರು?

1. ವಿಶ್ವವಿದ್ಯಾಲಯದಲ್ಲಿ ಉಪನ್ಯಾಸಕರು
2. ಹೈಸ್ಕೂಲಿನ ಇತಿಹಾಸದ ಅಧ್ಯಾಪಕರು
3. ಮಹಾರಾಜ ಕಾಲೇಜಿನಲ್ಲಿ ಉಪನ್ಯಾಸಕರು
4. ಹೈಸ್ಕೂಲಿನ ಕನ್ನಡ ಅಧ್ಯಾಪಕರು

**Options :**

485584133661. 1  
485584133662. 2  
485584133663. 3  
485584133664. 4

**Question Number : 52 Question Id : 48558433417 Question Type : MCQ Option Shuffling : No Is Question Mandatory : No Calculator : None Response Time : N.A Think Time : N.A Minimum Instruction Time : 0**

**Correct Marks : 5 Wrong Marks : 1**

**Question Key Details :**

Key	Value
Comprehension	Comp1

ಕೊಟ್ಟಿರುವ ವಾಕ್ಯ ಸಮಚ್ಛಯದಿಂದ ಆಯ್ದು ಕೆಳಗಿನ ಪ್ರಶ್ನೆಗಳಿಗೆ ಸರಿಯಾದ ಉತ್ತರವನ್ನು ಆಯ್ದು ಮಾಡಿ ಬರೆಯಿರಿ:

1924ನೇ ಜುಲೈ 2ನೇ ತಾರೀಖು ಬುಧವಾರದ ದಿನ ನನ್ನ ಜೀವನದಲ್ಲಿ - ವಿಶೇಷವಾಗಿ ಸಾಹಿತ್ಯ ಸಂಬಂಧವಾದ ಜೀವನದಲ್ಲಿ - ಒಂದು ಸ್ಮರಣೀಯವಾದ ದಿನ. ಮಹಾರಾಜ ಹೈಸ್ಕೂಲಿನ ಇತಿಹಾಸದ ಅಧ್ಯಾಪಕರಾಗಿದ್ದ ಎಂ.ಎಚ್. ಕೃಷ್ಣ ಅಯ್ಯಂಗಾರ್ಯರನ್ನು ಅವರ ಆಹ್ವಾನದ ಮೇರೆಗೆ ಹೋಗಿ ಕಂಡೆ. ಅನೇಕ ಪ್ರೋತ್ಸಾಹದ ಮಾತುಕತೆ ನಡೆದ ಮೇಲೆ, ಅವರು ವಿಶ್ವವಿದ್ಯಾಲಯಕ್ಕೆ ವಿಶೇಷ ಉಪನ್ಯಾಸಗಳನ್ನು ಕೊಡಲು ಬಂದಿದ್ದ ಐರಿಷ್ ಕವಿ ಜೇಮ್ಸ್ ಎಚ್. ಕಸಿನ್ಸ್ ಅವರ ವಿಚಾರ ತಿಳಿಸಿ, ಅವರನ್ನು ಕಂಡು ಅವರಿಗೆ ನನ್ನ ಕವನಗಳನ್ನು ತೋರಿಸುವಂತೆ ಹೇಳಿದರು.

ಶ್ರೀಯುತ ಕಸಿನ್ಸ್ ಅವರು ಇಳಿದುಕೊಂಡಿದ್ದ ಗೌರ್ನಮೆಂಟ್ ಗೆಸ್ಟ್ ಹೌಸಿಗೆ ಹೋದವು ನಾನೂ ನನ್ನೊಬ್ಬ ಸ್ನೇಹಿತರು. ಸ್ವಲ್ಪ ಏಕಾಂತವಾಗಿತ್ತು. ಉದ್ಯಾನ ಸೌಂದರ್ಯದ ಮಧ್ಯೆ ಗ್ರಾಮೀಣ ಮನಸ್ಸಿಗೆ ಗಾಬರಿ ಹುಟ್ಟಿಸುವ ಮಟ್ಟಿಗೆ ಭವ್ಯವಾಗಿತ್ತು ಆ ಕಟ್ಟಡ, ಅದರ ಶಿಸ್ತು. ಒಬ್ಬ ಅನುಚರ ನೌಕರ ಬಂದು ನಮ್ಮನ್ನು ಹೊರಗೆ ಇದ್ದ ಸೋಫಾದ ಮೇಲೆ ಕೂರಿಸಿ, ನನ್ನ ಹೆಸರು ಬರೆದುಕೊಟ್ಟ ಚೀಟಿಯನ್ನು ತೆಗೆದುಕೊಂಡು ಒಳಗೆ ಹೋದನು. ಬಹಳ ಹೊತ್ತು ಅವನು ಹೊರಗೆ ಬರಲಿಲ್ಲ. ನಾವಿಬ್ಬರೂ ಸಣ್ಣ ದನಿಯಲ್ಲಿ ಮಾತಾಡಿಕೊಳ್ಳುತ್ತಾ ಕಾದೆವು. ಬಹಳ ಹೊತ್ತಿನ ಮೇಲೆ ಅನುಚರ ಬಂದು ನನ್ನನ್ನು ಒಳಗೆ ಕರೆದೊಯ್ದು ಕಸಿನ್ಸ್ ಅವರು ಕುಳಿತಿದ್ದ ಸ್ವಲ್ಪ ನಿರ್ದೇಶನ ಮಾಡಿ ಹೊರಗೆ ಹೋದ. ನಾನು ಮುಂಬಂದು ಕಸಿನ್ಸ್ ಅವರ ಸಮೀಪದಲ್ಲಿಯೇ ಮತ್ತೊಂದು ಸೋಫಾದ ಮೇಲೆ ಕುಳಿತೆ. ನಮಸ್ಕಾರಾದಿಗಳ ನಂತರ, ನಾನು ಏತಕ್ಕೆ ಬಂದೆ, ಯಾರ ಸಲಹೆಯ ಮೇರೆಗೆ ಎಂಬುದನ್ನು ಹೇಳಿ ನನ್ನ ಕೈಲಿದ್ದ ಹಸ್ತಪ್ರತಿಯನ್ನು ಅವರಿಗೆ ಕೊಟ್ಟೆ. ಅವರು ಸ್ವಲ್ಪ ಹೊತ್ತು ಹಾಳೆಗಳನ್ನು ಮಗುಚಿ ಮಗುಚಿ ನೋಡಿದರು. ಮತ್ತೆ ತಲೆಯೆತ್ತಿ ನನ್ನನ್ನು ಆಪಾರಮಸ್ತಕ ನೋಡಿದರು. ನಾನು ಸ್ವದೇಶೀ ಚಳುವಳಿಯಲ್ಲಿ ಅಂಗಿ ಟೋಪಿಗಳನ್ನು ಬೆಂಕಿಗೆ ಎಸೆದಂದಿನಿಂದ ಖಾದಿ ಬಟ್ಟೆಯನ್ನೇ ಉಪಯೋಗಿಸುತ್ತಿದ್ದೆ; ಖಾದಿ ಟೋಪಿ, ಖಾದಿ ಷರಟು, ಖಾದಿ ಪಂಚೆ.

ಕಸಿನ್ಸ್ ಸ್ವಲ್ಪ ಅಸಮಾಧಾನದ ಧ್ವನಿಯಿಂದಲೇ ಮಾತನಾಡಿದರು. "ಏನಿದೆಲ್ಲ ಕಗ್ಗ? ನಿಮ್ಮ ಮೈಮೇಲೆ ನೋಡಿದರೆ ತಲೆಯಿಂದ ಕಾಲಿನವರೆಗೂ ಸ್ವದೇಶೀ ವಸ್ತುಗಳೇ ಕಾಣುತ್ತವೆ. ಇದು ಮಾತ್ರ ಸ್ವದೇಶಿಯಲ್ಲ. ನಿಮ್ಮ ಭಾಷೆಯಲ್ಲಿ ಏನಾದರೂ ಬರೆದಿದ್ದೀರಾ?"

"ಐರಿಷ್" ನಾಡಿನಿಂದ ಬಂದಿದ್ದ ಕವಿ ಯಾರು?

1. ಜೇಮ್ಸ್ ಎಲ್. ಬ್ರ್ಯಾಂಡ್
2. ಕೃಷ್ಣ ಅಯ್ಯಂಗಾರು
3. ಕಸಿನ್ಸ್ ಎಚ್.ಜಿ.
4. ಜೇಮ್ಸ್ ಎಚ್. ಕಸಿನ್ಸ್

**Options :**

485584133665. 1  
485584133666. 2  
485584133667. 3  
485584133668. 4

**Question Number : 53 Question Id : 48558433418 Question Type : MCQ Option Shuffling : No Is Question Mandatory : No Calculator : None Response Time : N.A Think Time : N.A Minimum Instruction Time : 0**

**Correct Marks : 5 Wrong Marks : 1**

**Question Key Details :**

Key	Value
Comprehension	Comp1

ಕೊಟ್ಟಿರುವ ವಾಕ್ಯ ಸಮಚ್ಛಯದಿಂದ ಆಯ್ದು ಕೆಲಗಿನ ಪ್ರಶ್ನೆಗಳಿಗೆ ಸರಿಯಾದ ಉತ್ತರವನ್ನು ಆಯ್ದು ಮಾಡಿ ಬರೆಯಿರಿ:

1924ನೇ ಜುಲೈ 2ನೇ ತಾರೀಖು ಬುಧವಾರದ ದಿನ ನನ್ನ ಜೀವನದಲ್ಲಿ - ವಿಶೇಷವಾಗಿ ಸಾಹಿತ್ಯ ಸಂಬಂಧವಾದ ಜೀವನದಲ್ಲಿ - ಒಂದು ಸ್ಮರಣೀಯವಾದ ದಿನ. ಮಹಾರಾಜ ಹೈಸ್ಕೂಲಿನ ಇತಿಹಾಸದ ಅಧ್ಯಾಪಕರಾಗಿದ್ದ ಎಂ.ಎಚ್. ಕೃಷ್ಣ ಅಯ್ಯಂಗಾರ್ಯರನ್ನು ಅವರ ಆಹ್ವಾನದ ಮೇರೆಗೆ ಹೋಗಿ ಕಂಡೆ. ಅನೇಕ ಪ್ರೋತ್ಸಾಹದ ಮಾತುಕತೆ ನಡೆದ ಮೇಲೆ, ಅವರು ವಿಶ್ವವಿದ್ಯಾಲಯಕ್ಕೆ ವಿಶೇಷ ಉಪನ್ಯಾಸಗಳನ್ನು ಕೊಡಲು ಬಂದಿದ್ದ ಐರಿಷ್ ಕವಿ ಜೇಮ್ಸ್ ಎಚ್. ಕಸಿನ್ಸ್ ಅವರ ವಿಚಾರ ತಿಳಿಸಿ, ಅವರನ್ನು ಕಂಡು ಅವರಿಗೆ ನನ್ನ ಕವನಗಳನ್ನು ತೋರಿಸುವಂತೆ ಹೇಳಿದರು.

ಶ್ರೀಯುತ ಕಸಿನ್ಸ್ ಅವರು ಇಳಿದುಕೊಂಡಿದ್ದ ಗೌರ್ನಮೆಂಟ್ ಗೆಸ್ಟ್ ಹೌಸಿಗೆ ಹೋದವು ನಾನೂ ನನ್ನೊಬ್ಬ ಸ್ನೇಹಿತರು. ಸ್ವಲ್ಪ ಏಕಾಂತವಾಗಿತ್ತು. ಉದ್ಯಾನ ಸೌಂದರ್ಯದ ಮಧ್ಯೆ ಗ್ರಾಮೀಣ ಮನಸ್ಸಿಗೆ ಗಾಬರಿ ಹುಟ್ಟಿಸುವ ಮಟ್ಟಿಗೆ ಭವ್ಯವಾಗಿತ್ತು ಆ ಕಟ್ಟಡ, ಅದರ ಶಿಸ್ತು. ಒಬ್ಬ ಅನುಚರ ನೌಕರ ಬಂದು ನಮ್ಮನ್ನು ಹೊರಗೆ ಇದ್ದ ಸೋಫಾದ ಮೇಲೆ ಕೂರಿಸಿ, ನನ್ನ ಹೆಸರು ಬರೆದುಕೊಟ್ಟ ಚೀಟಿಯನ್ನು ತೆಗೆದುಕೊಂಡು ಒಳಗೆ ಹೋದನು. ಬಹಳ ಹೊತ್ತು ಅವನು ಹೊರಗೆ ಬರಲಿಲ್ಲ. ನಾವಿಬ್ಬರೂ ಸಣ್ಣ ದನಿಯಲ್ಲಿ ಮಾತಾಡಿಕೊಳ್ಳುತ್ತಾ ಕಾದೆವು. ಬಹಳ ಹೊತ್ತಿನ ಮೇಲೆ ಅನುಚರ ಬಂದು ನನ್ನನ್ನು ಒಳಗೆ ಕರೆದೊಯ್ದು ಕಸಿನ್ಸ್ ಅವರು ಕುಳಿತಿದ್ದ ಸ್ವಲ್ಪ ನಿರ್ದೇಶನ ಮಾಡಿ ಹೊರಗೆ ಹೋದ. ನಾನು ಮುಂಬಂದು ಕಸಿನ್ಸ್ ಅವರ ಸಮೀಪದಲ್ಲಿಯೇ ಮತ್ತೊಂದು ಸೋಫಾದ ಮೇಲೆ ಕುಳಿತೆ. ನಮಸ್ಕಾರಾದಿಗಳ ನಂತರ, ನಾನು ಏತಕ್ಕೆ ಬಂದೆ, ಯಾರ ಸಲಹೆಯ ಮೇರೆಗೆ ಎಂಬುದನ್ನು ಹೇಳಿ ನನ್ನ ಕೈಲಿದ್ದ ಹಸ್ತಪ್ರತಿಯನ್ನು ಅವರಿಗೆ ಕೊಟ್ಟೆ. ಅವರು ಸ್ವಲ್ಪ ಹೊತ್ತು ಹಾಳೆಗಳನ್ನು ಮಗುಚಿ ಮಗುಚಿ ನೋಡಿದರು. ಮತ್ತೆ ತಲೆಯೆತ್ತಿ ನನ್ನನ್ನು ಆಪಾರಮಸ್ತಕ ನೋಡಿದರು. ನಾನು ಸ್ವದೇಶೀ ಚಳುವಳಿಯಲ್ಲಿ ಅಂಗಿ ಟೋಪಿಗಳನ್ನು ಬೆಂಕಿಗೆ ಎಸೆದಂದಿನಿಂದ ಖಾದಿ ಬಟ್ಟೆಯನ್ನೇ ಉಪಯೋಗಿಸುತ್ತಿದ್ದೆ; ಖಾದಿ ಟೋಪಿ, ಖಾದಿ ಷರಟು, ಖಾದಿ ಪಂಚೆ.

ಕಸಿನ್ಸ್ ಸ್ವಲ್ಪ ಅಸಮಾಧಾನದ ಧ್ವನಿಯಿಂದಲೇ ಮಾತನಾಡಿದರು. “ಏನಿದೆಲ್ಲ ಕಗ್ಗ? ನಿಮ್ಮ ಮೈಮೇಲೆ ನೋಡಿದರೆ ತಲೆಯಿಂದ ಕಾಲಿನವರೆಗೂ ಸ್ವದೇಶೀ ವಸ್ತುಗಳೇ ಕಾಣುತ್ತವೆ. ಇದು ಮಾತ್ರ ಸ್ವದೇಶೀಯಲ್ಲ. ನಿಮ್ಮ ಭಾಷೆಯಲ್ಲಿ ಏನಾದರೂ ಬರೆದಿದ್ದೀರಾ?”

ಶ್ರೀಯುತ ಕಸಿನ್ಸ್ ಉಳಿದುಕೊಂಡಿದ್ದ ಸ್ವಲ್ಪ ಯಾವುದು?

1. ಮಹಾರಾಜ ಹೈಸ್ಕೂಲ್
2. ವಿಶ್ವವಿದ್ಯಾಲಯ
3. ಗೆಸ್ಟ್ ಹೌಸ್
4. ಸ್ನೇಹಿತರ ಮನೆ

**Options :**

485584133669. 1  
485584133670. 2  
485584133671. 3  
485584133672. 4

**Question Number : 54 Question Id : 48558433419 Question Type : MCQ Option Shuffling : No Is Question Mandatory : No Calculator : None Response Time : N.A Think Time : N.A Minimum Instruction Time : 0**

**Correct Marks : 5 Wrong Marks : 1**

**Question Key Details :**

Key	Value
Comprehension	Comp1

ಕೊಟ್ಟಿರುವ ವಾಕ್ಯ ಸಮಚ್ಛಯದಿಂದ ಆಯ್ದು ಕೆಲಗಿನ ಪ್ರಶ್ನೆಗಳಿಗೆ ಸರಿಯಾದ ಉತ್ತರವನ್ನು ಆಯ್ದು ಮಾಡಿ ಬರೆಯಿರಿ:

1924ನೇ ಜುಲೈ 2ನೇ ತಾರೀಖು ಬುಧವಾರದ ದಿನ ನನ್ನ ಜೀವನದಲ್ಲಿ - ವಿಶೇಷವಾಗಿ ಸಾಹಿತ್ಯ ಸಂಬಂಧವಾದ ಜೀವನದಲ್ಲಿ - ಒಂದು ಸ್ಮರಣೀಯವಾದ ದಿನ. ಮಹಾರಾಜ ಹೈಸ್ಕೂಲಿನ ಇತಿಹಾಸದ ಅಧ್ಯಾಪಕರಾಗಿದ್ದ ಎಂ.ಎಚ್. ಕೃಷ್ಣ ಅಯ್ಯಂಗಾರ್ಯರನ್ನು ಅವರ ಆಹ್ವಾನದ ಮೇರೆಗೆ ಹೋಗಿ ಕಂಡೆ. ಅನೇಕ ಪ್ರೋತ್ಸಾಹದ ಮಾತುಕತೆ ನಡೆದ ಮೇಲೆ, ಅವರು ವಿಶ್ವವಿದ್ಯಾಲಯಕ್ಕೆ ವಿಶೇಷ ಉಪನ್ಯಾಸಗಳನ್ನು ಕೊಡಲು ಬಂದಿದ್ದ ಐರಿಷ್ ಕವಿ ಜೇಮ್ಸ್ ಎಚ್. ಕಸಿನ್ಸ್ ಅವರ ವಿಚಾರ ತಿಳಿಸಿ, ಅವರನ್ನು ಕಂಡು ಅವರಿಗೆ ನನ್ನ ಕವನಗಳನ್ನು ತೋರಿಸುವಂತೆ ಹೇಳಿದರು.

ಶ್ರೀಯುತ ಕಸಿನ್ಸ್ ಅವರು ಇಳಿದುಕೊಂಡಿದ್ದ ಗೌರ್ನಮೆಂಟ್ ಗೆಸ್ಟ್ ಹೌಸಿಗೆ ಹೋದವು ನಾನೂ ನನ್ನೊಬ್ಬ ಸ್ನೇಹಿತರು. ಸ್ವಲ್ಪ ಏಕಾಂತವಾಗಿತ್ತು. ಉದ್ಯಾನ ಸೌಂದರ್ಯದ ಮಧ್ಯೆ ಗ್ರಾಮೀಣ ಮನಸ್ಸಿಗೆ ಗಾಬರಿ ಹುಟ್ಟಿಸುವ ಮಟ್ಟಿಗೆ ಭವ್ಯವಾಗಿತ್ತು ಆ ಕಟ್ಟಡ, ಅದರ ಶಿಸ್ತು. ಒಬ್ಬ ಅನುಚರ ನೌಕರ ಬಂದು ನಮ್ಮನ್ನು ಹೊರಗೆ ಇದ್ದ ಸೋಫಾದ ಮೇಲೆ ಕೂರಿಸಿ, ನನ್ನ ಹೆಸರು ಬರೆದುಕೊಟ್ಟ ಚೀಟಿಯನ್ನು ತೆಗೆದುಕೊಂಡು ಒಳಗೆ ಹೋದನು. ಬಹಳ ಹೊತ್ತು ಅವನು ಹೊರಗೆ ಬರಲಿಲ್ಲ. ನಾವಿಬ್ಬರೂ ಸಣ್ಣ ದನಿಯಲ್ಲಿ ಮಾತಾಡಿಕೊಳ್ಳುತ್ತಾ ಕಾದೆವು. ಬಹಳ ಹೊತ್ತಿನ ಮೇಲೆ ಅನುಚರ ಬಂದು ನನ್ನನ್ನು ಒಳಗೆ ಕರೆದೊಯ್ದು ಕಸಿನ್ಸ್ ಅವರು ಕುಳಿತಿದ್ದ ಸ್ವಲ್ಪ ನಿರ್ದೇಶನ ಮಾಡಿ ಹೊರಗೆ ಹೋದ. ನಾನು ಮುಂಬಂದು ಕಸಿನ್ಸ್ ಅವರ ಸಮೀಪದಲ್ಲಿಯೇ ಮತ್ತೊಂದು ಸೋಫಾದ ಮೇಲೆ ಕುಳಿತೆ. ನಮಸ್ಕಾರಾದಿಗಳ ನಂತರ, ನಾನು ಏತಕ್ಕೆ ಬಂದೆ, ಯಾರ ಸಲಹೆಯ ಮೇರೆಗೆ ಎಂಬುದನ್ನು ಹೇಳಿ ನನ್ನ ಕೈಲಿದ್ದ ಹಸ್ತಪ್ರತಿಯನ್ನು ಅವರಿಗೆ ಕೊಟ್ಟೆ. ಅವರು ಸ್ವಲ್ಪ ಹೊತ್ತು ಹಾಳೆಗಳನ್ನು ಮಗುಚಿ ಮಗುಚಿ ನೋಡಿದರು. ಮತ್ತೆ ತಲೆಯೆತ್ತಿ ನನ್ನನ್ನು ಆಪಾರಮಸ್ತಕ ನೋಡಿದರು. ನಾನು ಸ್ವದೇಶೀ ಚಳುವಳಿಯಲ್ಲಿ ಅಂಗಿ ಟೋಪಿಗಳನ್ನು ಬೆಂಕಿಗೆ ಎಸೆದಂದಿನಿಂದ ಖಾದಿ ಬಟ್ಟೆಯನ್ನೇ ಉಪಯೋಗಿಸುತ್ತಿದ್ದೆ; ಖಾದಿ ಟೋಪಿ, ಖಾದಿ ಷರಟು, ಖಾದಿ ಪಂಚೆ.

ಕಸಿನ್ಸ್ ಸ್ವಲ್ಪ ಅಸಮಾಧಾನದ ಧ್ವನಿಯಿಂದಲೇ ಮಾತನಾಡಿದರು. “ಏನಿದೆಲ್ಲ ಕಗ್ಗ? ನಿಮ್ಮ ಮೈಮೇಲೆ ನೋಡಿದರೆ ತಲೆಯಿಂದ ಕಾಲಿನವರೆಗೂ ಸ್ವದೇಶೀ ವಸ್ತುಗಳೇ ಕಾಣುತ್ತವೆ. ಇದು ಮಾತ್ರ ಸ್ವದೇಶಿಯಲ್ಲ. ನಿಮ್ಮ ಭಾಷೆಯಲ್ಲಿ ಏನಾದರೂ ಬರೆದಿದ್ದೀರಾ?”

ಉದ್ಯಾನ ಸೌಂದರ್ಯದ ಮಧ್ಯೆ ಕಟ್ಟಡ ಹೇಗಿತ್ತು?

1. ಬೃಹತ್ತಾಗಿತ್ತು
2. ಸುಂದರವಾಗಿತ್ತು
3. ದಿವ್ಯವಾಗಿತ್ತು
4. ಭವ್ಯವಾಗಿತ್ತು

**Options :**

485584133673. 1  
485584133674. 2  
485584133675. 3  
485584133676. 4

**Question Number : 55 Question Id : 48558433420 Question Type : MCQ Option Shuffling : No Is Question Mandatory : No Calculator : None Response Time : N.A Think Time : N.A Minimum Instruction Time : 0**

**Correct Marks : 5 Wrong Marks : 1**

**Question Key Details :**

Key	Value
Comprehension	Comp1

ಕೊಟ್ಟಿರುವ ವಾಕ್ಯ ಸಮಚ್ಛಯದಿಂದ ಆಯ್ದು ಕೆಲಗಿನ ಪ್ರಶ್ನೆಗಳಿಗೆ ಸರಿಯಾದ ಉತ್ತರವನ್ನು ಆಯ್ದು ಮಾಡಿ ಬರೆಯಿರಿ:

1924ನೇ ಜುಲೈ 2ನೇ ತಾರೀಖು ಬುಧವಾರದ ದಿನ ನನ್ನ ಜೀವನದಲ್ಲಿ - ವಿಶೇಷವಾಗಿ ಸಾಹಿತ್ಯ ಸಂಬಂಧವಾದ ಜೀವನದಲ್ಲಿ - ಒಂದು ಸ್ಮರಣೀಯವಾದ ದಿನ. ಮಹಾರಾಜ ಹೈಸ್ಕೂಲಿನ ಇತಿಹಾಸದ ಅಧ್ಯಾಪಕರಾಗಿದ್ದ ಎಂ.ಎಚ್. ಕೃಷ್ಣ ಅಯ್ಯಂಗಾರ್ಯರನ್ನು ಅವರ ಆಹ್ವಾನದ ಮೇರೆಗೆ ಹೋಗಿ ಕಂಡೆ. ಅನೇಕ ಪ್ರೋತ್ಸಾಹದ ಮಾತುಕತೆ ನಡೆದ ಮೇಲೆ, ಅವರು ವಿಶ್ವವಿದ್ಯಾಲಯಕ್ಕೆ ವಿಶೇಷ ಉಪನ್ಯಾಸಗಳನ್ನು ಕೊಡಲು ಬಂದಿದ್ದ ಐರಿಷ್ ಕವಿ ಜೇಮ್ಸ್ ಎಚ್. ಕಸಿನ್ಸ್ ಅವರ ವಿಚಾರ ತಿಳಿಸಿ, ಅವರನ್ನು ಕಂಡು ಅವರಿಗೆ ನನ್ನ ಕವನಗಳನ್ನು ತೋರಿಸುವಂತೆ ಹೇಳಿದರು.

ಶ್ರೀಯುತ ಕಸಿನ್ಸ್ ಅವರು ಇಳಿದುಕೊಂಡಿದ್ದ ಗೌರ್ನಮೆಂಟ್ ಗೆಸ್ಟ್ ಹೌಸಿಗೆ ಹೋದವು ನಾನೂ ನನ್ನೊಬ್ಬ ಸ್ನೇಹಿತರು. ಸ್ವಲ್ಪ ಏಕಾಂತವಾಗಿತ್ತು. ಉದ್ಯಾನ ಸೌಂದರ್ಯದ ಮಧ್ಯೆ ಗ್ರಾಮೀಣ ಮನಸ್ಸಿಗೆ ಗಾಬರಿ ಹುಟ್ಟಿಸುವ ಮಟ್ಟಿಗೆ ಭವ್ಯವಾಗಿತ್ತು ಆ ಕಟ್ಟಡ, ಅದರ ಶಿಸ್ತು. ಒಬ್ಬ ಅನುಚರ ನೌಕರ ಬಂದು ನಮ್ಮನ್ನು ಹೊರಗೆ ಇದ್ದ ಸೋಫಾದ ಮೇಲೆ ಕೂರಿಸಿ, ನನ್ನ ಹೆಸರು ಬರೆದುಕೊಟ್ಟ ಚೀಟಿಯನ್ನು ತೆಗೆದುಕೊಂಡು ಒಳಗೆ ಹೋದನು. ಬಹಳ ಹೊತ್ತು ಅವನು ಹೊರಗೆ ಬರಲಿಲ್ಲ. ನಾವಿಬ್ಬರೂ ಸಣ್ಣ ದನಿಯಲ್ಲಿ ಮಾತಾಡಿಕೊಳ್ಳುತ್ತಾ ಕಾದೆವು. ಬಹಳ ಹೊತ್ತಿನ ಮೇಲೆ ಅನುಚರ ಬಂದು ನನ್ನನ್ನು ಒಳಗೆ ಕರೆದೊಯ್ದು ಕಸಿನ್ಸ್ ಅವರು ಕುಳಿತಿದ್ದ ಸ್ವಲ್ಪ ನಿರ್ದೇಶನ ಮಾಡಿ ಹೊರಗೆ ಹೋದ. ನಾನು ಮುಂಬಂದು ಕಸಿನ್ಸ್ ಅವರ ಸಮೀಪದಲ್ಲಿಯೇ ಮತ್ತೊಂದು ಸೋಫಾದ ಮೇಲೆ ಕುಳಿತೆ. ನಮಸ್ಕಾರಾದಿಗಳ ನಂತರ, ನಾನು ಏತಕ್ಕೆ ಬಂದೆ, ಯಾರ ಸಲಹೆಯ ಮೇರೆಗೆ ಎಂಬುದನ್ನು ಹೇಳಿ ನನ್ನ ಕೈಲಿದ್ದ ಹಸ್ತಪ್ರತಿಯನ್ನು ಅವರಿಗೆ ಕೊಟ್ಟೆ. ಅವರು ಸ್ವಲ್ಪ ಹೊತ್ತು ಹಾಳೆಗಳನ್ನು ಮಗುಚಿ ಮಗುಚಿ ನೋಡಿದರು. ಮತ್ತೆ ತಲೆಯೆತ್ತಿ ನನ್ನನ್ನು ಆಪಾರಮಸ್ತಕ ನೋಡಿದರು. ನಾನು ಸ್ವದೇಶೀ ಚಳುವಳಿಯಲ್ಲಿ ಅಂಗಿ ಟೋಪಿಗಳನ್ನು ಬೆಂಕಿಗೆ ಎಸೆದಂದಿನಿಂದ ಖಾದಿ ಬಟ್ಟೆಯನ್ನೇ ಉಪಯೋಗಿಸುತ್ತಿದ್ದೆ: ಖಾದಿ ಟೋಪಿ, ಖಾದಿ ಷರಟು, ಖಾದಿ ಪಂಚೆ.

ಕಸಿನ್ಸ್ ಸ್ವಲ್ಪ ಅಸಮಾಧಾನದ ಧ್ವನಿಯಿಂದಲೇ ಮಾತನಾಡಿದರು. “ಏನಿದೆಲ್ಲ ಕಗ್ಗ? ನಿಮ್ಮ ಮೈಮೇಲೆ ನೋಡಿದರೆ ತಲೆಯಿಂದ ಕಾಲಿನವರೆಗೂ ಸ್ವದೇಶೀ ವಸ್ತುಗಳೇ ಕಾಣುತ್ತವೆ. ಇದು ಮಾತ್ರ ಸ್ವದೇಶಿಯಲ್ಲ. ನಿಮ್ಮ ಭಾಷೆಯಲ್ಲಿ ಏನಾದರೂ ಬರೆದಿದ್ದೀರಾ?”

ನಿರೂಪಕರು ಸ್ವದೇಶೀ ಚಳುವಳಿಯಲ್ಲಿ ಬೆಂಕಿಗೆ ಏನನ್ನು ಎಸೆದರು?

1. ಖಾದಿ-ಟೋಪಿ
2. ಅಂಗಿ-ಟೋಪಿ
3. ಅಂಗಿ-ಪಂಚೆ
4. ಖಾದಿ ಷರಟು

**Options :**

485584133677. 1  
485584133678. 2  
485584133679. 3  
485584133680. 4

**Sub-Section Number :**

2

**Sub-Section Id :**

4855842415

**Question Shuffling Allowed :**

No

**Is Section Default? :**

null

**Question Number : 56 Question Id : 48558433421 Question Type : MCQ Option Shuffling : No Is Question Mandatory :**

**No Calculator : None Response Time : N.A Think Time : N.A Minimum Instruction Time : 0**

**Correct Marks : 5 Wrong Marks : 1**



**Question Key Details :**

Key	Value
Comprehension	Comp2

ಈ ಕೆಳಗೆ ನೀಡಲಾದ ಪ್ರಶ್ನೆಗಳಿಗೆ ವಾಕ್ಯ ಸಮುಚ್ಚಯವನ್ನು ಆಧರಿಸಿ ಸರಿಯಾದ ಉತ್ತರ ಆರಿಸಿ ಬರೆಯಿರಿ. ಮರವು ತನಗೆ ಕಲ್ಲಿನಿಂದ ಹೊಡೆದವನಿಗೂ ಹಣ್ಣನ್ನು ಕೊಡುತ್ತದೆ. ಕಡಿಯುವ ಕೊಡಲಿಗೂ ಕಾವು ಕೊಡುತ್ತದೆ. ಕಡಿದು ಉರಿಸುವವರಿಗೆ ಅಡುಗೆ ತಯಾರಿಸುವುದಕ್ಕೆ ನೆರವಾಗುತ್ತದೆ. ಹೀಗೆ ತನ್ನ ದೇಹವನ್ನೇ ಮನುಷ್ಯನ ಉಪಯೋಗಕ್ಕಾಗಿ ಮೀಸಲಿಡುವ ಉದಾರ ಗುಣಕ್ಕೆ ಉದಾಹರಣೆಯಾಗಿ ಅದು ಬದುಕುತ್ತದೆ. ಕಡಿಕಡಿದಷ್ಟೂ ಅಡೆತಡೆಗಳನ್ನು ಬದಿಗೊತ್ತಿ ಮುನ್ನುಗ್ಗಿ ಬೆಳೆಯುತ್ತದೆ. ಬಾಳಲು ಉತ್ಸಾಹ ತುಂಬುವಂತೆ ಪ್ರೇರೇಪಿಸುತ್ತದೆ. ಬಿಳಲು ಬಿಟ್ಟು ಜಗದಗಲ ಹರಡಿ ನಿಂತ ಆಲದ ಮರವು ಹೆತ್ತವರನ್ನು ವೃದ್ಧಾಶ್ರಮಕ್ಕೆ ಬಿಟ್ಟು ಬರುವ ಮಕ್ಕಳನ್ನು ಕಂಡು ನಗುತ್ತದೆ. ಯಾರ ಸಹಾಯವೂ ಇಲ್ಲದೆ ತನ್ನಿಂದ ತಾನೇ ಬೆಳೆದ ತಾಳೆ ಮರ ಉರಿ ಬಿಸಿಲಲ್ಲೂ ಹಣ್ಣಿನಿತ್ತು ತಂಪು ನೀಡುತ್ತದೆ. ತೆಂಗು ಮತ್ತೊಬ್ಬರಿಗೆ ತಲೆ ಬಾಗಿ ಜೀತದಾಳಾಗದೆ ಎದೆಗಾರಿಕೆಯಿಂದ ಬಾಳುವುದನ್ನು ಕಲಿಸುತ್ತದೆ. ಉಪಕಾರ ಮಾಡದವನಿಗೂ ಎಳೆನೀರು ಕೊಟ್ಟು ಸೌಜನ್ಯ ತೋರುತ್ತದೆ.

ಹೀಗೆ ಒಂದೊಂದು ಮರವೂ ಮನುಷ್ಯರಿಗೆ ತೊಟ್ಟಿಲಿನಿಂದ ಚಟ್ಟದವರೆಗೂ ಜೊತೆಗಿದ್ದು ಕಲಿಸುತ್ತದೆ. ಪ್ರತಿ ಮರವೂ ಮಣ್ಣಿಗೆ ಋಣಿಯಾಗಿರುತ್ತದೆ. ಪ್ರಕೃತಿಯ ಅಂದವನ್ನು ಹೆಚ್ಚಿಸುತ್ತದೆ. ಶಾಂತಿ ಪ್ರೀತಿಗಳಲ್ಲದೆ ಮೌನವನ್ನೂ ಕಲಿಸುತ್ತದೆ. ಅದು ಭೂಮಿಯಲ್ಲಿ ಹುದುಗಿಕೊಂಡಿದ್ದಾಗ ಕಲ್ಲಿದ್ದಲ ಕಪ್ಪಾಗಿ ಮೌನವಹಿಸಿ ಕೊನೆಗೆ ಹೊಳಪಿನ ವಜ್ರವಾಗುತ್ತದೆ. ಹೀಗೆ ಮೌನಿಯಾದ ಮರವು ಮಾತು ಆರಂಭಿಸಿ ಮನುಷ್ಯರಿಗೆ ಪ್ರಶ್ನೆ ಕೇಳುತ್ತದೆ. “ಮನುಷ್ಯರೇ, ನಮ್ಮನ್ನು ಬಳಸಿ ಅದೆಷ್ಟು ಶಿಲುಬೆಗಳನ್ನು ತಯಾರಿಸಿದ್ದೀರಿ? ಆದರೆ ಮತ್ತೊಬ್ಬ ಏಸುವನ್ನು ಕಾಣಲು ಇಲ್ಲಿಯವರೆಗೂ ಸಾಧ್ಯವಾಗಲಿಲ್ಲ ಏಕೆ? ಹೋಗಲಿ ಬಿಡಿ, ನಿಮ್ಮನ್ನೇ ಬಳಸಿ ಒಂದ ಶಿಲುಬೆಯನ್ನಾದರೂ ತಯಾರಿಸಲು ಸಾಧ್ಯವಾಗುವುದಾದರೆ ಪ್ರಯತ್ನಿಸಿ. ಏಕೆಂದರೆ ಶಿಲುಬೆ ಬರಿಯ ಚಿಹ್ನೆಯಷ್ಟೇ ಅಲ್ಲ. ಅದು ಪ್ರೀತಿ, ತ್ಯಾಗ, ಕರುಣೆ ಮತ್ತು ಮನುಷ್ಯತ್ವದ ಸಂಕೇತ. ತಿನ್ನಲು ಹಣ್ಣು ಹಂಪಲು, ತಂಪಿಗೆ ನೆರಳು, ದೇಹಕ್ಕೆ ಉಡುಗೆ, ಆರೋಗ್ಯಕ್ಕೆ ಔಷಧ, ಆಸರೆಗೆ ಗೂಡು, ಭದ್ರತೆಗೆ ಬಾಗಿಲು, ಸುರಕ್ಷತೆಗೆ ಬೇಲಿ, ಸೌಂದರ್ಯಕ್ಕೆ ಮುಲಾಮು, ಒಗ್ಗರಣೆಗೆ ಎಣ್ಣೆ, ಬರೆಯಲು ಕಾಗದ-ಪೆನ್ಸಿಲ್, ಹುಟ್ಟಿದಾಗ ತೊಟ್ಟಿಲು, ನಡೆದಾಡಲು ಕಲಿಕೆ ಗಾಡಿ, ವಿಶ್ರಮಿಸಲು ಮಂಚ, ಓಡಾಡಲು ಪಾದರಕ್ಷೆ, ರಬ್ಬರ್, ಕಡೆಗೆ ಸುಡಲು ಚಿತೆಯಾಗಿಯೂ ನಾವು ಉಪಯೋಗಕ್ಕೆ ಬರುತ್ತೇವೆ. ನೀವು?”

ಕಡಿಯುವ ಕೊಡಲಿಗೂ ಕಾವು ನೀಡುವುದು ಯಾವುದು?

1. ಹಣ್ಣು
2. ಕಲ್ಲು
3. ಮನುಷ್ಯ
4. ಮರ

**Options :**

485584133681. 1  
485584133682. 2  
485584133683. 3  
485584133684. 4

**Question Number : 57 Question Id : 48558433422 Question Type : MCQ Option Shuffling : No Is Question Mandatory : No Calculator : None Response Time : N.A Think Time : N.A Minimum Instruction Time : 0**

**Correct Marks : 5 Wrong Marks : 1**

**Question Key Details :**

Key	Value
Comprehension	Comp2

ಈ ಕೆಳಗೆ ನೀಡಲಾದ ಪ್ರಶ್ನೆಗಳಿಗೆ ವಾಕ್ಯ ಸಮುಚ್ಚಯವನ್ನು ಆಧರಿಸಿ ಸರಿಯಾದ ಉತ್ತರ ಆರಿಸಿ ಬರೆಯಿರಿ. ಮರವು ತನಗೆ ಕಲ್ಲಿನಿಂದ ಹೊಡೆದವನಿಗೂ ಹಣ್ಣನ್ನು ಕೊಡುತ್ತದೆ. ಕಡಿಯುವ ಕೊಡಲಿಗೂ ಕಾವು ಕೊಡುತ್ತದೆ. ಕಡಿದು ಉರಿಸುವವರಿಗೆ ಅಡುಗೆ ತಯಾರಿಸುವುದಕ್ಕೆ ನೆರವಾಗುತ್ತದೆ. ಹೀಗೆ ತನ್ನ ದೇಹವನ್ನೇ ಮನುಷ್ಯನ ಉಪಯೋಗಕ್ಕಾಗಿ ಮೀಸಲಿಡುವ ಉದಾರ ಗುಣಕ್ಕೆ ಉದಾಹರಣೆಯಾಗಿ ಅದು ಬದುಕುತ್ತದೆ. ಕಡಿಕಡಿದಷ್ಟೂ ಅಡೆತಡೆಗಳನ್ನು ಬದಿಗೊತ್ತಿ ಮುನ್ನುಗ್ಗಿ ಬೆಳೆಯುತ್ತದೆ. ಬಾಳಲು ಉತ್ಸಾಹ ತುಂಬುವಂತೆ ಪ್ರೇರೇಪಿಸುತ್ತದೆ. ಬಿಳಲು ಬಿಟ್ಟು ಜಗದಗಲ ಹರಡಿ ನಿಂತ ಆಲದ ಮರವು ಹೆತ್ತವರನ್ನು ವೃದ್ಧಾಶ್ರಮಕ್ಕೆ ಬಿಟ್ಟು ಬರುವ ಮಕ್ಕಳನ್ನು ಕಂಡು ನಗುತ್ತದೆ. ಯಾರ ಸಹಾಯವೂ ಇಲ್ಲದೆ ತನ್ನಿಂದ ತಾನೇ ಬೆಳೆದ ತಾಳೆ ಮರ ಉರಿ ಬಿಸಿಲಲ್ಲೂ ಹಣ್ಣುನಿತ್ತು ತಂಪು ನೀಡುತ್ತದೆ. ತೆಂಗು ಮತ್ತೊಬ್ಬರಿಗೆ ತಲೆ ಬಾಗಿ ಜೀತದಾಳಾಗದೆ ಎದೆಗಾರಿಕೆಯಿಂದ ಬಾಳುವುದನ್ನು ಕಲಿಸುತ್ತದೆ. ಉಪಕಾರ ಮಾಡದವನಿಗೂ ಎಳೆನೀರು ಕೊಟ್ಟು ಸೌಜನ್ಯ ತೋರುತ್ತದೆ.

ಹೀಗೆ ಒಂದೊಂದು ಮರವೂ ಮನುಷ್ಯರಿಗೆ ತೊಟ್ಟಿಲಿನಿಂದ ಚಟ್ಟದವರೆಗೂ ಜೊತೆಗಿದ್ದು ಕಲಿಸುತ್ತದೆ. ಪ್ರತಿ ಮರವೂ ಮಣ್ಣಿಗೆ ಋಣಿಯಾಗಿರುತ್ತದೆ. ಪ್ರಕೃತಿಯ ಅಂದವನ್ನು ಹೆಚ್ಚಿಸುತ್ತದೆ. ಶಾಂತಿ ಪ್ರೀತಿಗಳಲ್ಲದೆ ಮೌನವನ್ನೂ ಕಲಿಸುತ್ತದೆ. ಅದು ಭೂಮಿಯಲ್ಲಿ ಹುದುಗಿಕೊಂಡಿದ್ದಾಗ ಕಲ್ಲಿದ್ದಲ ಕಪ್ಪಾಗಿ ಮೌನವಹಿಸಿ ಕೊನೆಗೆ ಹೊಳಪಿನ ವಜ್ರವಾಗುತ್ತದೆ. ಹೀಗೆ ಮೌನಿಯಾದ ಮರವು ಮಾತು ಆರಂಭಿಸಿ ಮನುಷ್ಯರಿಗೆ ಪ್ರಶ್ನೆ ಕೇಳುತ್ತದೆ. “ಮನುಷ್ಯರೇ, ನಮ್ಮನ್ನು ಬಳಸಿ ಅದೆಷ್ಟು ಶಿಲುಬೆಗಳನ್ನು ತಯಾರಿಸಿದ್ದೀರಿ? ಆದರೆ ಮತ್ತೊಬ್ಬ ಏಸುವನ್ನು ಕಾಣಲು ಇಲ್ಲಿಯವರೆಗೂ ಸಾಧ್ಯವಾಗಲಿಲ್ಲ ಏಕೆ? ಹೋಗಲಿ ಬಿಡಿ, ನಿಮ್ಮನ್ನೇ ಬಳಸಿ ಒಂದ ಶಿಲುಬೆಯನ್ನಾದರೂ ತಯಾರಿಸಲು ಸಾಧ್ಯವಾಗುವುದಾದರೆ ಪ್ರಯತ್ನಿಸಿ. ಏಕೆಂದರೆ ಶಿಲುಬೆ ಬರಿಯ ಚಿಹ್ನೆಯಷ್ಟೇ ಅಲ್ಲ. ಅದು ಪ್ರೀತಿ, ತ್ಯಾಗ, ಕರುಣೆ ಮತ್ತು ಮನುಷ್ಯತ್ವದ ಸಂಕೇತ. ತಿನ್ನಲು ಹಣ್ಣು ಹಂಪಲು, ತಂಪಿಗೆ ನೆರಳು, ದೇಹಕ್ಕೆ ಉಡುಗೆ, ಆರೋಗ್ಯಕ್ಕೆ ಔಷಧ, ಆಸರೆಗೆ ಗೂಡು, ಭದ್ರತೆಗೆ ಬಾಗಿಲು, ಸುರಕ್ಷತೆಗೆ ಬೇಲಿ, ಸೌಂದರ್ಯಕ್ಕೆ ಮುಲಾಮು, ಒಗ್ಗರಣೆಗೆ ಎಣ್ಣೆ, ಬರೆಯಲು ಕಾಗದ-ಪೆನ್ನಿಲ್, ಹುಟ್ಟಿದಾಗ ತೊಟ್ಟಿಲು, ನಡೆದಾಡಲು ಕಲಿಕೆ ಗಾಡಿ, ವಿಶ್ರಮಿಸಲು ಮಂಚ, ಓಡಾಡಲು ಪಾದರಕ್ಷೆ, ರಬ್ಬರ್, ಕಡೆಗೆ ಸುಡಲು ಚಿತೆಯಾಗಿಯೂ ನಾವು ಉಪಯೋಗಕ್ಕೆ ಬರುತ್ತೇವೆ. ನೀವು?”

ಯಾರನ್ನು ನೋಡಿ ಆಲದ ಮರ ನಗುತ್ತಿದೆ?

1. ಹೆತ್ತ ತಂದೆ-ತಾಯಿಗಳನ್ನು ನೋಡಿ
2. ಹೆತ್ತವರನ್ನು ವೃದ್ಧಾಶ್ರಮಕ್ಕೆ ಬಿಟ್ಟು ಮಕ್ಕಳನ್ನು ನೋಡಿ
3. ಕೊಡಲಿಯನ್ನು ನೋಡಿ
4. ಜೀತದಾಳುಗಳನ್ನು ನೋಡಿ

**Options :**

485584133685. 1  
 485584133686. 2  
 485584133687. 3  
 485584133688. 4

**Question Number : 58 Question Id : 48558433423 Question Type : MCQ Option Shuffling : No Is Question Mandatory : No Calculator : None Response Time : N.A Think Time : N.A Minimum Instruction Time : 0**

**Correct Marks : 5 Wrong Marks : 1**

**Question Key Details :**

Key	Value
Comprehension	Comp2

ಈ ಕೆಳಗೆ ನೀಡಲಾದ ಪ್ರಶ್ನೆಗಳಿಗೆ ವಾಕ್ಯ ಸಮುಚ್ಚಯವನ್ನು ಆಧರಿಸಿ ಸರಿಯಾದ ಉತ್ತರ ಆರಿಸಿ ಬರೆಯಿರಿ. ಮರವು ತನಗೆ ಕಲ್ಲಿನಿಂದ ಹೊಡೆದವನಿಗೂ ಹಣ್ಣನ್ನು ಕೊಡುತ್ತದೆ. ಕಡಿಯುವ ಕೊಡಲಿಗೂ ಕಾವು ಕೊಡುತ್ತದೆ. ಕಡಿದು ಉರಿಸುವವರಿಗೆ ಅಡುಗೆ ತಯಾರಿಸುವುದಕ್ಕೆ ನೆರವಾಗುತ್ತದೆ. ಹೀಗೆ ತನ್ನ ದೇಹವನ್ನೇ ಮನುಷ್ಯನ ಉಪಯೋಗಕ್ಕಾಗಿ ಮೀಸಲಿಡುವ ಉದಾರ ಗುಣಕ್ಕೆ ಉದಾಹರಣೆಯಾಗಿ ಅದು ಬದುಕುತ್ತದೆ. ಕಡಿಕಡಿದಷ್ಟೂ ಅಡೆತಡೆಗಳನ್ನು ಬದಿಗೊತ್ತಿ ಮುನ್ನುಗ್ಗಿ ಬೆಳೆಯುತ್ತದೆ. ಬಾಳಲು ಉತ್ಸಾಹ ತುಂಬುವಂತೆ ಪ್ರೇರೇಪಿಸುತ್ತದೆ. ಬಿಳಲು ಬಿಟ್ಟು ಜಗದಗಲ ಹರಡಿ ನಿಂತ ಆಲದ ಮರವು ಹೆತ್ತವರನ್ನು ವೃದ್ಧಾಶ್ರಮಕ್ಕೆ ಬಿಟ್ಟು ಬರುವ ಮಕ್ಕಳನ್ನು ಕಂಡು ನಗುತ್ತದೆ. ಯಾರ ಸಹಾಯವೂ ಇಲ್ಲದೆ ತನ್ನಿಂದ ತಾನೇ ಬೆಳೆದ ತಾಳೆ ಮರ ಉರಿ ಬಿಸಿಲಲ್ಲೂ ಹಣ್ಣುನಿತ್ತು ತಂಪು ನೀಡುತ್ತದೆ. ತೆಂಗು ಮತ್ತೊಬ್ಬರಿಗೆ ತಲೆ ಬಾಗಿ ಜೀತದಾಳಾಗದೆ ಎದೆಗಾರಿಕೆಯಿಂದ ಬಾಳುವುದನ್ನು ಕಲಿಸುತ್ತದೆ. ಉಪಕಾರ ಮಾಡದವನಿಗೂ ಎಳೆನೀರು ಕೊಟ್ಟು ಸೌಜನ್ಯ ತೋರುತ್ತದೆ.

ಹೀಗೆ ಒಂದೊಂದು ಮರವೂ ಮನುಷ್ಯರಿಗೆ ತೊಟ್ಟಿಲಿನಿಂದ ಚಟ್ಟದವರೆಗೂ ಜೊತೆಗಿದ್ದು ಕಲಿಸುತ್ತದೆ. ಪ್ರತಿ ಮರವೂ ಮಣ್ಣಿಗೆ ಋಣಿಯಾಗಿರುತ್ತದೆ. ಪ್ರಕೃತಿಯ ಅಂದವನ್ನು ಹೆಚ್ಚಿಸುತ್ತದೆ. ಶಾಂತಿ ಪ್ರೀತಿಗಳಲ್ಲದೆ ಮೌನವನ್ನೂ ಕಲಿಸುತ್ತದೆ. ಅದು ಭೂಮಿಯಲ್ಲಿ ಹುದುಗಿಕೊಂಡಿದ್ದಾಗ ಕಲ್ಲಿದ್ದಲ ಕಪ್ಪಾಗಿ ಮೌನವಹಿಸಿ ಕೊನೆಗೆ ಹೊಳಪಿನ ವಜ್ರವಾಗುತ್ತದೆ. ಹೀಗೆ ಮೌನಿಯಾದ ಮರವು ಮಾತು ಆರಂಭಿಸಿ ಮನುಷ್ಯರಿಗೆ ಪ್ರಶ್ನೆ ಕೇಳುತ್ತದೆ. “ಮನುಷ್ಯರೇ, ನಮ್ಮನ್ನು ಬಳಸಿ ಅದೆಷ್ಟು ಶಿಲುಬೆಗಳನ್ನು ತಯಾರಿಸಿದ್ದೀರಿ? ಆದರೆ ಮತ್ತೊಬ್ಬ ಏಸುವನ್ನು ಕಾಣಲು ಇಲ್ಲಿಯವರೆಗೂ ಸಾಧ್ಯವಾಗಲಿಲ್ಲ ಏಕೆ? ಹೋಗಲಿ ಬಿಡಿ, ನಿಮ್ಮನ್ನೇ ಬಳಸಿ ಒಂದ ಶಿಲುಬೆಯನ್ನಾದರೂ ತಯಾರಿಸಲು ಸಾಧ್ಯವಾಗುವುದಾದರೆ ಪ್ರಯತ್ನಿಸಿ. ಏಕೆಂದರೆ ಶಿಲುಬೆ ಬರಿಯ ಚಿಹ್ನೆಯಷ್ಟೇ ಅಲ್ಲ. ಅದು ಪ್ರೀತಿ, ತ್ಯಾಗ, ಕರುಣೆ ಮತ್ತು ಮನುಷ್ಯತ್ವದ ಸಂಕೇತ. ತಿನ್ನಲು ಹಣ್ಣು ಹಂಪಲು, ತಂಪಿಗೆ ನೆರಳು, ದೇಹಕ್ಕೆ ಉಡುಗೆ, ಆರೋಗ್ಯಕ್ಕೆ ಔಷಧ, ಆಸರೆಗೆ ಗೂಡು, ಭದ್ರತೆಗೆ ಬಾಗಿಲು, ಸುರಕ್ಷತೆಗೆ ಬೇಲಿ, ಸೌಂದರ್ಯಕ್ಕೆ ಮುಲಾಮು, ಒಗ್ಗರಣೆಗೆ ಎಣ್ಣೆ, ಬರೆಯಲು ಕಾಗದ-ಪೆನ್ನಿಲ್, ಹುಟ್ಟಿದಾಗ ತೊಟ್ಟಿಲು, ನಡೆದಾಡಲು ಕಲಿಕೆ ಗಾಡಿ, ವಿಶ್ರಮಿಸಲು ಮಂಚ, ಓಡಾಡಲು ಪಾದರಕ್ಷೆ, ರಬ್ಬರ್, ಕಡೆಗೆ ಸುಡಲು ಚಿತೆಯಾಗಿಯೂ ನಾವು ಉಪಯೋಗಕ್ಕೆ ಬರುತ್ತೇವೆ. ನೀವು?”

ಯಾವುದು ಎದೆಗಾರಿಕೆಯಿಂದ ಬಾಳುವುದನ್ನು ಕಲಿಸುತ್ತದೆ?

1. ತಾಳೆಮರ
2. ಆಲದ ಮರ
3. ತೆಂಗಿನಮರ
4. ಬೇವಿನ ಮರ

**Options :**

485584133689. 1  
 485584133690. 2  
 485584133691. 3  
 485584133692. 4

**Question Number : 59 Question Id : 48558433424 Question Type : MCQ Option Shuffling : No Is Question Mandatory : No Calculator : None Response Time : N.A Think Time : N.A Minimum Instruction Time : 0**

**Correct Marks : 5 Wrong Marks : 1**

**Question Key Details :**

Key	Value
Comprehension	Comp2

ಈ ಕೆಳಗೆ ನೀಡಲಾದ ಪ್ರಶ್ನೆಗಳಿಗೆ ವಾಕ್ಯ ಸಮುಚ್ಚಯವನ್ನು ಆಧರಿಸಿ ಸರಿಯಾದ ಉತ್ತರ ಆರಿಸಿ ಬರೆಯಿರಿ. ಮರವು ತನಗೆ ಕಲ್ಲಿನಿಂದ ಹೊಡೆದವನಿಗೂ ಹಣ್ಣನ್ನು ಕೊಡುತ್ತದೆ. ಕಡಿಯುವ ಕೊಡಲಿಗೂ ಕಾವು ಕೊಡುತ್ತದೆ. ಕಡಿದು ಉರಿಸುವವರಿಗೆ ಅಡುಗೆ ತಯಾರಿಸುವುದಕ್ಕೆ ನೆರವಾಗುತ್ತದೆ. ಹೀಗೆ ತನ್ನ ದೇಹವನ್ನೇ ಮನುಷ್ಯನ ಉಪಯೋಗಕ್ಕಾಗಿ ಮೀಸಲಿಡುವ ಉದಾರ ಗುಣಕ್ಕೆ ಉದಾಹರಣೆಯಾಗಿ ಅದು ಬದುಕುತ್ತದೆ. ಕಡಿಕಡಿದಷ್ಟೂ ಅಡೆತಡೆಗಳನ್ನು ಬದಿಗೊತ್ತಿ ಮುನ್ನುಗ್ಗಿ ಬೆಳೆಯುತ್ತದೆ. ಬಾಳಲು ಉತ್ಸಾಹ ತುಂಬುವಂತೆ ಪ್ರೇರೇಪಿಸುತ್ತದೆ. ಬಿಳಲು ಬಿಟ್ಟು ಜಗದಗಲ ಹರಡಿ ನಿಂತ ಆಲದ ಮರವು ಹೆತ್ತವರನ್ನು ವೃದ್ಧಾಶ್ರಮಕ್ಕೆ ಬಿಟ್ಟು ಬರುವ ಮಕ್ಕಳನ್ನು ಕಂಡು ನಗುತ್ತದೆ. ಯಾರ ಸಹಾಯವೂ ಇಲ್ಲದೆ ತನ್ನಿಂದ ತಾನೇ ಬೆಳೆದ ತಾಳೆ ಮರ ಉರಿ ಬಿಸಿಲಲ್ಲೂ ಹಣ್ಣುನಿತ್ತು ತಂಪು ನೀಡುತ್ತದೆ. ತೆಂಗು ಮತ್ತೊಬ್ಬರಿಗೆ ತಲೆ ಬಾಗಿ ಜೀತದಾಳಾಗದೆ ಎದೆಗಾರಿಕೆಯಿಂದ ಬಾಳುವುದನ್ನು ಕಲಿಸುತ್ತದೆ. ಉಪಕಾರ ಮಾಡದವನಿಗೂ ಎಳೆನೀರು ಕೊಟ್ಟು ಸೌಜನ್ಯ ತೋರುತ್ತದೆ.

ಹೀಗೆ ಒಂದೊಂದು ಮರವೂ ಮನುಷ್ಯರಿಗೆ ತೊಟ್ಟಿಲಿನಿಂದ ಚಟ್ಟದವರೆಗೂ ಜೊತೆಗಿದ್ದು ಕಲಿಸುತ್ತದೆ. ಪ್ರತಿ ಮರವೂ ಮಣ್ಣಿಗೆ ಋಣಿಯಾಗಿರುತ್ತದೆ. ಪ್ರಕೃತಿಯ ಅಂದವನ್ನು ಹೆಚ್ಚಿಸುತ್ತದೆ. ಶಾಂತಿ ಪ್ರೀತಿಗಳಲ್ಲದೆ ಮೌನವನ್ನೂ ಕಲಿಸುತ್ತದೆ. ಅದು ಭೂಮಿಯಲ್ಲಿ ಹುದುಗಿಕೊಂಡಿದ್ದಾಗ ಕಲ್ಲಿದ್ದಲ ಕಪ್ಪಾಗಿ ಮೌನವಹಿಸಿ ಕೊನೆಗೆ ಹೊಳಪಿನ ವಜ್ರವಾಗುತ್ತದೆ. ಹೀಗೆ ಮೌನಿಯಾದ ಮರವು ಮಾತು ಆರಂಭಿಸಿ ಮನುಷ್ಯರಿಗೆ ಪ್ರಶ್ನೆ ಕೇಳುತ್ತದೆ. “ಮನುಷ್ಯರೇ, ನಮ್ಮನ್ನು ಬಳಸಿ ಅದೆಷ್ಟು ಶಿಲುಬೆಗಳನ್ನು ತಯಾರಿಸಿದ್ದೀರಿ? ಆದರೆ ಮತ್ತೊಬ್ಬ ಏಸುವನ್ನು ಕಾಣಲು ಇಲ್ಲಿಯವರೆಗೂ ಸಾಧ್ಯವಾಗಲಿಲ್ಲ ಏಕೆ? ಹೋಗಲಿ ಬಿಡಿ, ನಿಮ್ಮನ್ನೇ ಬಳಸಿ ಒಂದ ಶಿಲುಬೆಯನ್ನಾದರೂ ತಯಾರಿಸಲು ಸಾಧ್ಯವಾಗುವುದಾದರೆ ಪ್ರಯತ್ನಿಸಿ. ಏಕೆಂದರೆ ಶಿಲುಬೆ ಬರಿಯ ಚಿಹ್ನೆಯಷ್ಟೇ ಅಲ್ಲ. ಅದು ಪ್ರೀತಿ, ತ್ಯಾಗ, ಕರುಣೆ ಮತ್ತು ಮನುಷ್ಯತ್ವದ ಸಂಕೇತ. ತಿನ್ನಲು ಹಣ್ಣು ಹಂಪಲು, ತಂಪಿಗೆ ನೆರಳು, ದೇಹಕ್ಕೆ ಉಡುಗೆ, ಆರೋಗ್ಯಕ್ಕೆ ಔಷಧ, ಆಸರೆಗೆ ಗೂಡು, ಭದ್ರತೆಗೆ ಬಾಗಿಲು, ಸುರಕ್ಷತೆಗೆ ಬೇಲಿ, ಸೌಂದರ್ಯಕ್ಕೆ ಮುಲಾಮು, ಒಗ್ಗರಣೆಗೆ ಎಣ್ಣೆ, ಬರೆಯಲು ಕಾಗದ-ಪೆನ್ನಿಲ್, ಹುಟ್ಟಿದಾಗ ತೊಟ್ಟಿಲು, ನಡೆದಾಡಲು ಕಲಿಕೆ ಗಾಡಿ, ವಿಶ್ರಮಿಸಲು ಮಂಚ, ಓಡಾಡಲು ಪಾದರಕ್ಷೆ, ರಬ್ಬರ್, ಕಡೆಗೆ ಸುಡಲು ಚಿತೆಯಾಗಿಯೂ ನಾವು ಉಪಯೋಗಕ್ಕೆ ಬರುತ್ತೇವೆ. ನೀವು?”

ಪ್ರಕೃತಿಯ ಅಂದವನ್ನು ಹೆಚ್ಚಿಸುವ ಶಕ್ತಿಯಿರುವುದು .....

1. ಮನುಷ್ಯನಿಗೆ
2. ಹಣ್ಣುಗಳಿಗೆ
3. ಮರಗಳಿಗೆ
4. ವಜ್ರಗಳಿಗೆ

**Options :**

- 485584133693. 1
- 485584133694. 2
- 485584133695. 3
- 485584133696. 4

**Question Number : 60 Question Id : 48558433425 Question Type : MCQ Option Shuffling : No Is Question Mandatory : No Calculator : None Response Time : N.A Think Time : N.A Minimum Instruction Time : 0**

**Correct Marks : 5 Wrong Marks : 1**

**Question Key Details :**

Key	Value
Comprehension	Comp2

ಈ ಕೆಳಗೆ ನೀಡಲಾದ ಪ್ರಶ್ನೆಗಳಿಗೆ ವಾಕ್ಯ ಸಮುಚ್ಚಯವನ್ನು ಆಧರಿಸಿ ಸರಿಯಾದ ಉತ್ತರ ಆರಿಸಿ ಬರೆಯಿರಿ. ಮರವು ತನಗೆ ಕಲ್ಲಿನಿಂದ ಹೊಡೆದವನಿಗೂ ಹಣ್ಣನ್ನು ಕೊಡುತ್ತದೆ. ಕಡಿಯುವ ಕೊಡಲಿಗೂ ಕಾವು ಕೊಡುತ್ತದೆ. ಕಡಿದು ಉರಿಸುವವರಿಗೆ ಅಡುಗೆ ತಯಾರಿಸುವುದಕ್ಕೆ ನೆರವಾಗುತ್ತದೆ. ಹೀಗೆ ತನ್ನ ದೇಹವನ್ನೇ ಮನುಷ್ಯನ ಉಪಯೋಗಕ್ಕಾಗಿ ಮೀಸಲಿಡುವ ಉದಾರ ಗುಣಕ್ಕೆ ಉದಾಹರಣೆಯಾಗಿ ಅದು ಬದುಕುತ್ತದೆ. ಕಡಿಕಡಿದಷ್ಟೂ ಅಡೆತಡೆಗಳನ್ನು ಬದಿಗೊತ್ತಿ ಮುನ್ನುಗ್ಗಿ ಬೆಳೆಯುತ್ತದೆ. ಬಾಳಲು ಉತ್ಸಾಹ ತುಂಬುವಂತೆ ಪ್ರೇರೇಪಿಸುತ್ತದೆ. ಬಿಳಲು ಬಿಟ್ಟು ಜಗದಗಲ ಹರಡಿ ನಿಂತ ಆಲದ ಮರವು ಹೆತ್ತವರನ್ನು ವೃದ್ಧಾಶ್ರಮಕ್ಕೆ ಬಿಟ್ಟು ಬರುವ ಮಕ್ಕಳನ್ನು ಕಂಡು ನಗುತ್ತದೆ. ಯಾರ ಸಹಾಯವೂ ಇಲ್ಲದೆ ತನ್ನಿಂದ ತಾನೇ ಬೆಳೆದ ತಾಳೆ ಮರ ಉರಿ ಬಿಸಿಲಲ್ಲೂ ಹಣ್ಣುನಿತ್ತು ತಂಪು ನೀಡುತ್ತದೆ. ತೆಂಗು ಮತ್ತೊಬ್ಬರಿಗೆ ತಲೆ ಬಾಗಿ ಜೀತದಾಳಾಗದೆ ಎದೆಗಾರಿಕೆಯಿಂದ ಬಾಳುವುದನ್ನು ಕಲಿಸುತ್ತದೆ. ಉಪಕಾರ ಮಾಡದವನಿಗೂ ಎಳೆನೀರು ಕೊಟ್ಟು ಸೌಜನ್ಯ ತೋರುತ್ತದೆ.

ಹೀಗೆ ಒಂದೊಂದು ಮರವೂ ಮನುಷ್ಯರಿಗೆ ತೊಟ್ಟಿಲಿನಿಂದ ಚಟ್ಟದವರೆಗೂ ಜೊತೆಗಿದ್ದು ಕಲಿಸುತ್ತದೆ. ಪ್ರತಿ ಮರವೂ ಮಣ್ಣಿಗೆ ಋಣಿಯಾಗಿರುತ್ತದೆ. ಪ್ರಕೃತಿಯ ಅಂದವನ್ನು ಹೆಚ್ಚಿಸುತ್ತದೆ. ಶಾಂತಿ ಪ್ರೀತಿಗಳಲ್ಲದೆ ಮೌನವನ್ನೂ ಕಲಿಸುತ್ತದೆ. ಅದು ಭೂಮಿಯಲ್ಲಿ ಹುದುಗಿಕೊಂಡಿದ್ದಾಗ ಕಲ್ಲಿದ್ದಲ ಕಪ್ಪಾಗಿ ಮೌನವಹಿಸಿ ಕೊನೆಗೆ ಹೊಳಪಿನ ವಜ್ರವಾಗುತ್ತದೆ. ಹೀಗೆ ಮೌನಿಯಾದ ಮರವು ಮಾತು ಆರಂಭಿಸಿ ಮನುಷ್ಯರಿಗೆ ಪ್ರಶ್ನೆ ಕೇಳುತ್ತದೆ. “ಮನುಷ್ಯರೇ, ನಮ್ಮನ್ನು ಬಳಸಿ ಅದೆಷ್ಟು ಶಿಲುಬೆಗಳನ್ನು ತಯಾರಿಸಿದ್ದೀರಿ? ಆದರೆ ಮತ್ತೊಬ್ಬ ಏಸುವನ್ನು ಕಾಣಲು ಇಲ್ಲಿಯವರೆಗೂ ಸಾಧ್ಯವಾಗಲಿಲ್ಲ ಏಕೆ? ಹೋಗಲಿ ಬಿಡಿ, ನಿಮ್ಮನ್ನೇ ಬಳಸಿ ಒಂದ ಶಿಲುಬೆಯನ್ನಾದರೂ ತಯಾರಿಸಲು ಸಾಧ್ಯವಾಗುವುದಾದರೆ ಪ್ರಯತ್ನಿಸಿ. ಏಕೆಂದರೆ ಶಿಲುಬೆ ಬರಿಯ ಚಿಹ್ನೆಯಷ್ಟೇ ಅಲ್ಲ. ಅದು ಪ್ರೀತಿ, ತ್ಯಾಗ, ಕರುಣೆ ಮತ್ತು ಮನುಷ್ಯತ್ವದ ಸಂಕೇತ. ತಿನ್ನಲು ಹಣ್ಣು ಹಂಪಲು, ತಂಪಿಗೆ ನೆರಳು, ದೇಹಕ್ಕೆ ಉಡುಗೆ, ಆರೋಗ್ಯಕ್ಕೆ ಔಷಧ, ಆಸರೆಗೆ ಗೂಡು, ಭದ್ರತೆಗೆ ಬಾಗಿಲು, ಸುರಕ್ಷತೆಗೆ ಬೇಲಿ, ಸೌಂದರ್ಯಕ್ಕೆ ಮುಲಾಮು, ಒಗ್ಗರಣೆಗೆ ಎಣ್ಣೆ, ಬರೆಯಲು ಕಾಗದ-ಪೆನ್ನಿಲ್, ಹುಟ್ಟಿದಾಗ ತೊಟ್ಟಿಲು, ನಡೆದಾಡಲು ಕಲಿಕೆ ಗಾಡಿ, ವಿಶ್ರಮಿಸಲು ಮಂಚ, ಓಡಾಡಲು ಪಾದರಕ್ಷೆ, ರಬ್ಬರ್, ಕಡೆಗೆ ಸುಡಲು ಚಿತೆಯಾಗಿಯೂ ನಾವು ಉಪಯೋಗಕ್ಕೆ ಬರುತ್ತೇವೆ. ನೀವು?”

ಮರಗಳು ನಮಗೆ ಯಾವುದನ್ನು ನೀಡುವುದಿಲ್ಲ?

1. ಕಲ್ಲು
2. ತೊಟ್ಟಿಲು
3. ಉಡುಪು
4. ಎಣ್ಣೆ

**Options :**

485584133697. 1  
485584133698. 2  
485584133699. 3  
485584133700. 4

**Sub-Section Number :**

3

**Sub-Section Id :**

4855842416

**Question Shuffling Allowed :**

No

**Is Section Default? :**

null

**Question Number : 61 Question Id : 48558433426 Question Type : MCQ Option Shuffling : No Is Question Mandatory : No Calculator : None Response Time : N.A Think Time : N.A Minimum Instruction Time : 0**

**Correct Marks : 5 Wrong Marks : 1**

**Question Key Details :**

Key	Value
Comprehension	Comp3

ಈ ಕೆಳಕಂಡ ಪ್ರಶ್ನೆಗಳಿಗೆ ವಾಕ್ಯ ಸಮುಚ್ಚಯವನ್ನು ಆಧರಿಸಿ ಸರಿಯಾದ ಉತ್ತರ ಆಯ್ಕೆ ಮಾಡಿ:  
 ಕೆರೆಕೊಪ್ಪದಲ್ಲಿ ನಮಗೆಲ್ಲಾ ಚರಟದ ಕಾಫಿ. ಆದರೆ ಕೆಲವು ಸಾರಿ ಅಜ್ಜಯ್ಯನಿಗೆ, ನನ್ನ ತಂದೆ ಶಾನುಭೋಗರಿಗೆ ಮತ್ತು ಅವರ ಗೆಳೆಯರಾದ ಊರಿನ ಪಟೇಲರಿಗೆ ಮಾತ್ರ 'ಒರಿಜಿನಲ್' ಕಾಫಿ ಪುಡಿಯ ಕಾಫಿ. ಕಾಫಿ ಬೀಜಗಳನ್ನು ಆಗಲೇ ಹುರಿದು, ಆಗಲೇ ಪುಡಿ ಮಾಡಿ, ಆಗಲೇ ಕುದಿಯುವ ನೀರಿಗೆ ಬೆರೆಸಿ, ಮುಚ್ಚಿಟ್ಟು, ಅದು ಗಸಿ ಇಳಿಯುವಷ್ಟು ಹೊತ್ತು ಕಾದು, ಅದಕ್ಕಾಗಿಯೇ ಇದ್ದ ಬಟ್ಟೆಗೆ ಸುರಿದು, ಹಿಂಡಿ, ಡಿಸಾಕ್ಟನ್ ಇಳಿಯುವಾಗ ಕಳೆದುಕೊಂಡ ಉಷ್ಣಾಂಶವನ್ನು ಬಿಸಿ ಬಿಸಿ ಎಮ್ಮೆ ಹಾಲು ಬೆರೆಸಿ ಹದಮಾಡಿ, ಕಾಫಿ ಮಾಡುವುದು ಸಾಮಾನ್ಯವಾಗಿತ್ತು. ಈ ಕಾಫಿಯನ್ನು ಫಳಫಳ ಹೊಳೆಯುವ ಒಂದು ಹಿತ್ತಾಳೆ ಲೋಟದಿಂದ ಇನ್ನೊಂದು ಲೋಟಕ್ಕೆ ನೋರೆ ಬರುವಂತೆ ಹಲವು ಸಾರಿ ಹುಯ್ದು ಕುದಿಯಲು ಅಗತ್ಯವಾದ ಬಿಸಿಗೆ ಅದನ್ನು ಇಳಿಸಿ, ಸೆರಗು ಮುಚ್ಚಿದ ಕೈಯ ಮೇಲೆ ಅದನ್ನು ಇಟ್ಟುಕೊಂಡು ಹಸನ್ಮುಖಿಯಾಗಿ ಅಮ್ಮ ಕುದಿಯಲು ಕೊಡುತ್ತಿದ್ದರು. ಮಕ್ಕಳಿಗೂ ನನಗೂ ಎಲ್ಲೋ ಒಂದೊಂದು ಸಾರಿ ಈ ಕಾಫಿಯ ಪುಣ್ಯ ಸಿಗುತ್ತಿತ್ತು. ನಿತ್ಯ ಈ ಕಾಫಿಯ ಘಮಘಮದ ವಾಸನೆಯನ್ನು ಕೊಂಚವಾದರೂ ಉಳಿಸಿಕೊಂಡ ಅದರ ಚರಟ ಕುದಿಸಿ ಮಾಡಿದ ಕಾಫಿಯ ಸೇವನೆ ನಮಗೆ. ಇವೆಲ್ಲದರ ತಯಾರಿಯೂ ನೆನಪಾಗುತ್ತದೆ. ಕಾಫಿ ಬೀಜವನ್ನು ಬ್ಯಾರಿಯೊಬ್ಬರು ತಿಂಗಳಿಗೊಮ್ಮೆ ನಮಗೆ ತಂದುಕೊಡುತ್ತಿದ್ದರು. ಈ ವಿಶೇಷ ಪದಾರ್ಥಗಳೆಲ್ಲವನ್ನೂ ಕಡವಾಗಿ ನಾವು ಪಡೆಯುವುದು ವರ್ಷಕ್ಕೊಮ್ಮೆ ಅಂದರೆ, ದೀಪಾವಳಿಯಿಂದ ಇನ್ನೊಂದು ದೀಪಾವಳಿಗೆ, ಯುಗಾದಿಯಿಂದ ಇನ್ನೊಂದು ಯುಗಾದಿಗೆ, ಗೌರಿ ಹಬ್ಬದಿಂದ ಇನ್ನೊಂದು ಗೌರಿ ಹಬ್ಬದವರೆಗೆ ಈ ಕಡದ ಅವಧಿ. ನಾವು ಬೆಳೆದ ಅಡಿಕೆಯನ್ನೋ, ಭತ್ತವನ್ನೋ ಬದಲಿಗೆ ಕೊಟ್ಟು ಕಡವನ್ನು ತೀರಿಸುತ್ತಿದ್ದರು. ಜರಿ ಟೋಪಿ ತೊಟ್ಟ ಬ್ಯಾರಿ ಬಂದಾಗಲೆಲ್ಲ ನಮಗೆ ಸಕ್ಕರೆಯಿಂದ ಮಾಡಿದ ಮಿಠಾಯಿ ಪುಕ್ಕಟೆ ಸಿಗುತ್ತಿತ್ತು. ನನ್ನ ಭಯ ನಿವಾರಣೆಗೆಂದು ಎಂದೋ ಒಮ್ಮೆ ಕರಡಿ ಆಡಿಸುವವನು ತಂದ ಕಡುಕಪ್ಪು ಕರಡಿ ಮೇಲೆ ನನ್ನನ್ನು ಕೂಡಿಸಿ ಅಂಗಳ ಸುತ್ತಿಸಿದ್ದೂ ನೆನಪಿದೆ.

ಕೈಯಲ್ಲಿ ಕಾಸಾಡದ ಆ ಕಾಲದಲ್ಲಿ ಹಲವು ಸಾರಿ ಮನೆಯಲ್ಲಿ ಎಲ್ಲರಿಗೂ ಕಾಫಿ ಮಾಡುವಷ್ಟು ಅನುಕೂಲ ಇರುತ್ತಿರಲಿಲ್ಲ. ಕೆಲವೊಮ್ಮೆ ಅಮ್ಮ ಸ್ವಲ್ಪ ಕಾಫಿ ಪುಡಿಯಲ್ಲಿ ಒಂದು ಲೋಟ ಕಾಫಿ ಮಾಡಿ ಅಪ್ಪನಿಗೆ ಕೊಟ್ಟು, ಆ ಕಾಫಿ ಮಾಡಿದ ಚರಟದಲ್ಲಿ ನನಗೆ, ತನಗೆ ಮತ್ತು ನನ್ನಜ್ಜನಿಗೆ ಕೊಡುತ್ತಿದ್ದರು. ಅಜ್ಜ ಮನೆಗೆ ಹಿರಿಯರಾದ್ದರಿಂದ 'ನನಗೆ ಚರಟದಲ್ಲಿ ಕಾಫಿಯೋ?' ಅಂತ ಕೇಳಿದ್ದಿದೆ.

ಬಿಸಿಯಾದ ಕಾಫಿಯನ್ನು ಯಾವುದರಲ್ಲಿ ಸುರಿಯಲಾಗುತ್ತಿತ್ತು?

1. ಪಾತ್ರೆಯಿಂದ ಹಿತ್ತಾಳೆ ಲೋಟಕ್ಕೆ
2. ಲೋಟದಿಂದ ಹಿತ್ತಾಳೆ ಪಾತ್ರೆಗೆ
3. ಹಿತ್ತಾಳೆ ಲೋಟದಿಂದ ಇನ್ನೊಂದು ಲೋಟಕ್ಕೆ
4. ಪಾತ್ರೆಯಿಂದ ಇನ್ನೊಂದು ಪಾತ್ರೆಗೆ

**Options :**

485584133701. 1  
 485584133702. 2  
 485584133703. 3  
 485584133704. 4

**Question Number : 62 Question Id : 48558433427 Question Type : MCQ Option Shuffling : No Is Question Mandatory : No Calculator : None Response Time : N.A Think Time : N.A Minimum Instruction Time : 0**

**Correct Marks : 5 Wrong Marks : 1**

**Question Key Details :**

Key	Value
Comprehension	Comp3

ಈ ಕೆಳಕಂಡ ಪ್ರಶ್ನೆಗಳಿಗೆ ವಾಕ್ಯ ಸಮುಚ್ಚಯವನ್ನು ಆಧರಿಸಿ ಸರಿಯಾದ ಉತ್ತರ ಆಯ್ಕೆ ಮಾಡಿ:  
ಕೆರೆಕೊಪ್ಪದಲ್ಲಿ ನಮಗೆಲ್ಲಾ ಚರಟದ ಕಾಫಿ. ಆದರೆ ಕೆಲವು ಸಾರಿ ಅಜ್ಜಯ್ಯನಿಗೆ, ನನ್ನ ತಂದೆ ಶಾನುಭೋಗರಿಗೆ ಮತ್ತು ಅವರ ಗೆಲೆಯರಾದ ಊರಿನ ಪಟೇಲರಿಗೆ ಮಾತ್ರ 'ಒರಿಜಿನಲ್' ಕಾಫಿ ಪುಡಿಯ ಕಾಫಿ. ಕಾಫಿ ಬೀಜಗಳನ್ನು ಆಗಲೇ ಹುರಿದು, ಆಗಲೇ ಪುಡಿ ಮಾಡಿ, ಆಗಲೇ ಕುದಿಯುವ ನೀರಿಗೆ ಬೆರೆಸಿ, ಮುಚ್ಚಿಟ್ಟು, ಅದು ಗಸಿ ಇಲಿಯುವಷ್ಟು ಹೊತ್ತು ಕಾದು, ಅದಕ್ಕಾಗಿಯೇ ಇದ್ದ ಬಟ್ಟೆಗೆ ಸುರಿದು, ಹಿಂಡಿ, ಡಿಸಾಕ್ಟನ್ ಇಲಿಯುವಾಗ ಕಳೆದುಕೊಂಡ ಉಷ್ಣಾಂಶವನ್ನು ಬಿಸಿ ಬಿಸಿ ಎಮ್ಮೆ ಹಾಲು ಬೆರೆಸಿ ಹದಮಾಡಿ, ಕಾಫಿ ಮಾಡುವುದು ಸಾಮಾನ್ಯವಾಗಿತ್ತು. ಈ ಕಾಫಿಯನ್ನು ಫಳಫಳ ಹೊಲೆಯುವ ಒಂದು ಹಿತ್ತಾಳೆ ಲೋಟದಿಂದ ಇನ್ನೊಂದು ಲೋಟಕ್ಕೆ ನೋರೆ ಬರುವಂತೆ ಹಲವು ಸಾರಿ ಹುಯ್ದು ಕುಡಿಯಲು ಅಗತ್ಯವಾದ ಬಿಸಿಗೆ ಅದನ್ನು ಇಳಿಸಿ, ಸೆರಗು ಮುಚ್ಚಿದ ಕೈಯ ಮೇಲೆ ಅದನ್ನು ಇಟ್ಟುಕೊಂಡು ಹಸನ್ಮುಖಿಯಾಗಿ ಅಮ್ಮ ಕುಡಿಯಲು ಕೊಡುತ್ತಿದ್ದರು. ಮಕ್ಕಳಿಗೂ ನನಗೂ ಎಲ್ಲೋ ಒಂದೊಂದು ಸಾರಿ ಈ ಕಾಫಿಯ ಪುಣ್ಯ ಸಿಗುತ್ತಿತ್ತು. ನಿತ್ಯ ಈ ಕಾಫಿಯ ಘಮಘಮದ ವಾಸನೆಯನ್ನು ಕೊಂಚವಾದರೂ ಉಳಿಸಿಕೊಂಡ ಅದರ ಚರಟ ಕುದಿಸಿ ಮಾಡಿದ ಕಾಫಿಯ ಸೇವನೆ ನಮಗೆ. ಇವೆಲ್ಲದರ ತಯಾರಿಯೂ ನೆನಪಾಗುತ್ತದೆ. ಕಾಫಿ ಬೀಜವನ್ನು ಬ್ಯಾರಿಯೊಬ್ಬರು ತಿಂಗಳಿಗೊಮ್ಮೆ ನಮಗೆ ತಂದುಕೊಡುತ್ತಿದ್ದರು. ಈ ವಿಶೇಷ ಪದಾರ್ಥಗಳೆಲ್ಲವನ್ನೂ ಕಡವಾಗಿ ನಾವು ಪಡೆಯುವುದು ವರ್ಷಕ್ಕೊಮ್ಮೆ ಅಂದರೆ, ದೀಪಾವಳಿಯಿಂದ ಇನ್ನೊಂದು ದೀಪಾವಳಿಗೆ, ಯುಗಾದಿಯಿಂದ ಇನ್ನೊಂದು ಯುಗಾದಿಗೆ, ಗೌರಿ ಹಬ್ಬದಿಂದ ಇನ್ನೊಂದು ಗೌರಿ ಹಬ್ಬದವರೆಗೆ ಈ ಕಡದ ಅವಧಿ. ನಾವು ಬೆಳೆದ ಅಡಿಕೆಯನ್ನೋ, ಭತ್ತವನ್ನೋ ಬದಲಿಗೆ ಕೊಟ್ಟು ಕಡವನ್ನು ತೀರಿಸುತ್ತಿದ್ದರು. ಜರಿ ಟೋಪಿ ತೊಟ್ಟ ಬ್ಯಾರಿ ಬಂದಾಗಲೆಲ್ಲ ನಮಗೆ ಸಕ್ಕರೆಯಿಂದ ಮಾಡಿದ ಮಿಠಾಯಿ ಪುಕ್ಕಟೆ ಸಿಗುತ್ತಿತ್ತು. ನನ್ನ ಭಯ ನಿವಾರಣೆಗೆಂದು ಎಂದೋ ಒಮ್ಮೆ ಕರಡಿ ಆಡಿಸುವವನು ತಂದ ಕಡುಕಪ್ಪು ಕರಡಿ ಮೇಲೆ ನನ್ನನ್ನು ಕೂಡಿಸಿ ಅಂಗಳ ಸುತ್ತಿಸಿದ್ದೂ ನೆನಪಿದೆ. ಕೈಯಲ್ಲಿ ಕಾಸಾಡದ ಆ ಕಾಲದಲ್ಲಿ ಹಲವು ಸಾರಿ ಮನೆಯಲ್ಲಿ ಎಲ್ಲರಿಗೂ ಕಾಫಿ ಮಾಡುವಷ್ಟು ಅನುಕೂಲ ಇರುತ್ತಿರಲಿಲ್ಲ. ಕೆಲವೊಮ್ಮೆ ಅಮ್ಮ ಸ್ವಲ್ಪ ಕಾಫಿ ಪುಡಿಯಲ್ಲಿ ಒಂದು ಲೋಟ ಕಾಫಿ ಮಾಡಿ ಅಪ್ಪನಿಗೆ ಕೊಟ್ಟು, ಆ ಕಾಫಿ ಮಾಡಿದ ಚರಟದಲ್ಲಿ ನನಗೆ, ತನಗೆ ಮತ್ತು ನನ್ನಜ್ಜನಿಗೆ ಕೊಡುತ್ತಿದ್ದರು. ಅಜ್ಜ ಮನೆಗೆ ಹಿರಿಯರಾದ್ದರಿಂದ 'ನನಗೆ ಚರಟದಲ್ಲಿ ಕಾಫಿಯೋ?' ಅಂತ ಕೇಳಿದ್ದಿದೆ.

ಕಥೆಗಾರನಿಗೆ ಸಿಗುತ್ತಿದ್ದ ಕಾಫಿಯ ಪುಣ್ಯ ....

1. ಪ್ರತಿನಿತ್ಯ
2. ಒಮ್ಮೊಮ್ಮೆ
3. ಆಗಿಂದಾಗ್ಗೆ
4. ತಿಂಗಳಿಗೊಮ್ಮೆ

**Options :**

485584133705. 1  
485584133706. 2  
485584133707. 3  
485584133708. 4

**Question Number : 63 Question Id : 48558433428 Question Type : MCQ Option Shuffling : No Is Question Mandatory : No Calculator : None Response Time : N.A Think Time : N.A Minimum Instruction Time : 0**

**Correct Marks : 5 Wrong Marks : 1**

**Question Key Details :**

Key	Value
Comprehension	Comp3

ಈ ಕೆಳಕಂಡ ಪ್ರಶ್ನೆಗಳಿಗೆ ವಾಕ್ಯ ಸಮುಚ್ಚಯವನ್ನು ಆಧರಿಸಿ ಸರಿಯಾದ ಉತ್ತರ ಆಯ್ಕೆ ಮಾಡಿ:  
 ಕೆರೆಕೊಪ್ಪದಲ್ಲಿ ನಮಗೆಲ್ಲಾ ಚರಟದ ಕಾಫಿ. ಆದರೆ ಕೆಲವು ಸಾರಿ ಅಜ್ಜಯ್ಯನಿಗೆ, ನನ್ನ ತಂದೆ ಶಾನುಭೋಗರಿಗೆ ಮತ್ತು ಅವರ ಗೆಳೆಯರಾದ ಊರಿನ ಪಟೇಲರಿಗೆ ಮಾತ್ರ 'ಒರಿಜಿನಲ್' ಕಾಫಿ ಪುಡಿಯ ಕಾಫಿ. ಕಾಫಿ ಬೀಜಗಳನ್ನು ಆಗಲೇ ಹುರಿದು, ಆಗಲೇ ಪುಡಿ ಮಾಡಿ, ಆಗಲೇ ಕುದಿಯುವ ನೀರಿಗೆ ಬೆರೆಸಿ, ಮುಚ್ಚಿಟ್ಟು, ಅದು ಗಸಿ ಇಳಿಯುವಷ್ಟು ಹೊತ್ತು ಕಾದು, ಅದಕ್ಕಾಗಿಯೇ ಇದ್ದ ಬಟ್ಟೆಗೆ ಸುರಿದು, ಹಿಂಡಿ, ಡಿಸಾಕ್ಟನ್ ಇಳಿಯುವಾಗ ಕಳೆದುಕೊಂಡ ಉಷ್ಣಾಂಶವನ್ನು ಬಿಸಿ ಬಿಸಿ ಎಮ್ಮೆ ಹಾಲು ಬೆರೆಸಿ ಹದಮಾಡಿ, ಕಾಫಿ ಮಾಡುವುದು ಸಾಮಾನ್ಯವಾಗಿತ್ತು. ಈ ಕಾಫಿಯನ್ನು ಫಳಫಳ ಹೊಳೆಯುವ ಒಂದು ಹಿತ್ತಾಳೆ ಲೋಟದಿಂದ ಇನ್ನೊಂದು ಲೋಟಕ್ಕೆ ನೋರೆ ಬರುವಂತೆ ಹಲವು ಸಾರಿ ಹುಯ್ದು ಕುದಿಯಲು ಅಗತ್ಯವಾದ ಬಿಸಿಗೆ ಅದನ್ನು ಇಳಿಸಿ, ಸೆರಗು ಮುಚ್ಚಿದ ಕೈಯ ಮೇಲೆ ಅದನ್ನು ಇಟ್ಟುಕೊಂಡು ಹಸನ್ಮುಖಿಯಾಗಿ ಅಮ್ಮ ಕುದಿಯಲು ಕೊಡುತ್ತಿದ್ದರು. ಮಕ್ಕಳಿಗೂ ನನಗೂ ಎಲ್ಲೋ ಒಂದೊಂದು ಸಾರಿ ಈ ಕಾಫಿಯ ಪುಣ್ಯ ಸಿಗುತ್ತಿತ್ತು. ನಿತ್ಯ ಈ ಕಾಫಿಯ ಘಮಘಮದ ವಾಸನೆಯನ್ನು ಕೊಂಚವಾದರೂ ಉಳಿಸಿಕೊಂಡ ಅದರ ಚರಟ ಕುದಿಸಿ ಮಾಡಿದ ಕಾಫಿಯ ಸೇವನೆ ನಮಗೆ. ಇವೆಲ್ಲದರ ತಯಾರಿಯೂ ನೆನಪಾಗುತ್ತದೆ. ಕಾಫಿ ಬೀಜವನ್ನು ಬ್ಯಾರಿಯೊಬ್ಬರು ತಿಂಗಳಿಗೊಮ್ಮೆ ನಮಗೆ ತಂದುಕೊಡುತ್ತಿದ್ದರು. ಈ ವಿಶೇಷ ಪದಾರ್ಥಗಳೆಲ್ಲವನ್ನೂ ಕಡವಾಗಿ ನಾವು ಪಡೆಯುವುದು ವರ್ಷಕ್ಕೊಮ್ಮೆ ಅಂದರೆ, ದೀಪಾವಳಿಯಿಂದ ಇನ್ನೊಂದು ದೀಪಾವಳಿಗೆ, ಯುಗಾದಿಯಿಂದ ಇನ್ನೊಂದು ಯುಗಾದಿಗೆ, ಗೌರಿ ಹಬ್ಬದಿಂದ ಇನ್ನೊಂದು ಗೌರಿ ಹಬ್ಬದವರೆಗೆ ಈ ಕಡದ ಅವಧಿ. ನಾವು ಬೆಳೆದ ಅಡಿಕೆಯನ್ನೋ, ಭತ್ತವನ್ನೋ ಬದಲಿಗೆ ಕೊಟ್ಟು ಕಡವನ್ನು ತೀರಿಸುತ್ತಿದ್ದರು. ಜರಿ ಟೋಪಿ ತೊಟ್ಟ ಬ್ಯಾರಿ ಬಂದಾಗಲೆಲ್ಲ ನಮಗೆ ಸಕ್ಕರೆಯಿಂದ ಮಾಡಿದ ಮಿಠಾಯಿ ಪುಕ್ಕಟೆ ಸಿಗುತ್ತಿತ್ತು. ನನ್ನ ಭಯ ನಿವಾರಣೆಗೆಂದು ಎಂದೋ ಒಮ್ಮೆ ಕರಡಿ ಆಡಿಸುವವನು ತಂದ ಕಡುಕಪ್ಪು ಕರಡಿ ಮೇಲೆ ನನ್ನನ್ನು ಕೂಡಿಸಿ ಅಂಗಳ ಸುತ್ತಿಸಿದ್ದೂ ನೆನಪಿದೆ.

ಕೈಯಲ್ಲಿ ಕಾಸಾಡದ ಆ ಕಾಲದಲ್ಲಿ ಹಲವು ಸಾರಿ ಮನೆಯಲ್ಲಿ ಎಲ್ಲರಿಗೂ ಕಾಫಿ ಮಾಡುವಷ್ಟು ಅನುಕೂಲ ಇರುತ್ತಿರಲಿಲ್ಲ. ಕೆಲವೊಮ್ಮೆ ಅಮ್ಮ ಸ್ವಲ್ಪ ಕಾಫಿ ಪುಡಿಯಲ್ಲಿ ಒಂದು ಲೋಟ ಕಾಫಿ ಮಾಡಿ ಅಪ್ಪನಿಗೆ ಕೊಟ್ಟು, ಆ ಕಾಫಿ ಮಾಡಿದ ಚರಟದಲ್ಲಿ ನನಗೆ, ತನಗೆ ಮತ್ತು ನನ್ನಜ್ಜನಿಗೆ ಕೊಡುತ್ತಿದ್ದರು. ಅಜ್ಜ ಮನೆಗೆ ಹಿರಿಯರಾದ್ದರಿಂದ 'ನನಗೆ ಚರಟದಲ್ಲಿ ಕಾಫಿಯೋ?' ಅಂತ ಕೇಳಿದ್ದಿದೆ.

ಮಕ್ಕಳಿಗೆ ಸಕ್ಕರೆ ಮಿಠಾಯಿಯನ್ನು ನೀಡುತ್ತಿದ್ದವರು ಯಾರು?

1. ಬ್ಯಾರಿ
2. ಅಮ್ಮ
3. ಅಪ್ಪ
4. ಅಜ್ಜ

**Options :**

485584133709. 1  
 485584133710. 2  
 485584133711. 3  
 485584133712. 4

**Question Number : 64 Question Id : 48558433429 Question Type : MCQ Option Shuffling : No Is Question Mandatory : No Calculator : None Response Time : N.A Think Time : N.A Minimum Instruction Time : 0**

**Correct Marks : 5 Wrong Marks : 1**

**Question Key Details :**

Key	Value
Comprehension	Comp3



ಈ ಕೆಳಕಂಡ ಪ್ರಶ್ನೆಗಳಿಗೆ ವಾಕ್ಯ ಸಮುಚ್ಚಯವನ್ನು ಆಧರಿಸಿ ಸರಿಯಾದ ಉತ್ತರ ಆಯ್ಕೆ ಮಾಡಿ:  
ಕೆರೆಕೊಪ್ಪದಲ್ಲಿ ನಮಗೆಲ್ಲಾ ಚರಟದ ಕಾಫಿ. ಆದರೆ ಕೆಲವು ಸಾರಿ ಅಜ್ಜಯ್ಯನಿಗೆ, ನನ್ನ ತಂದೆ ಶಾನುಭೋಗರಿಗೆ ಮತ್ತು ಅವರ ಗೆಳೆಯರಾದ ಊರಿನ ಪಟೇಲರಿಗೆ ಮಾತ್ರ 'ಒರಿಜಿನಲ್' ಕಾಫಿ ಪುಡಿಯ ಕಾಫಿ. ಕಾಫಿ ಬೀಜಗಳನ್ನು ಆಗಲೇ ಹುರಿದು, ಆಗಲೇ ಪುಡಿ ಮಾಡಿ, ಆಗಲೇ ಕುದಿಯುವ ನೀರಿಗೆ ಬೆರೆಸಿ, ಮುಚ್ಚಿಟ್ಟು, ಅದು ಗಸಿ ಇಳಿಯುವಷ್ಟು ಹೊತ್ತು ಕಾದು, ಅದಕ್ಕಾಗಿಯೇ ಇದ್ದ ಬಟ್ಟೆಗೆ ಸುರಿದು, ಹಿಂಡಿ, ಡಿಸಾಕ್ಟನ್ ಇಳಿಯುವಾಗ ಕಳೆದುಕೊಂಡ ಉಷ್ಣಾಂಶವನ್ನು ಬಿಸಿ ಬಿಸಿ ಎಮ್ಮೆ ಹಾಲು ಬೆರೆಸಿ ಹದಮಾಡಿ, ಕಾಫಿ ಮಾಡುವುದು ಸಾಮಾನ್ಯವಾಗಿತ್ತು. ಈ ಕಾಫಿಯನ್ನು ಫಳಫಳ ಹೊಳೆಯುವ ಒಂದು ಹಿತ್ತಾಳೆ ಲೋಟದಿಂದ ಇನ್ನೊಂದು ಲೋಟಕ್ಕೆ ನೋರೆ ಬರುವಂತೆ ಹಲವು ಸಾರಿ ಹುಯ್ದು ಕುದಿಯಲು ಅಗತ್ಯವಾದ ಬಿಸಿಗೆ ಅದನ್ನು ಇಳಿಸಿ, ಸೆರಗು ಮುಚ್ಚಿದ ಕೈಯ ಮೇಲೆ ಅದನ್ನು ಇಟ್ಟುಕೊಂಡು ಹಸನ್ಮುಖಿಯಾಗಿ ಅಮ್ಮ ಕುದಿಯಲು ಕೊಡುತ್ತಿದ್ದರು. ಮಕ್ಕಳಿಗೂ ನನಗೂ ಎಲ್ಲೋ ಒಂದೊಂದು ಸಾರಿ ಈ ಕಾಫಿಯ ಪುಣ್ಯ ಸಿಗುತ್ತಿತ್ತು. ನಿತ್ಯ ಈ ಕಾಫಿಯ ಘಮಘಮದ ವಾಸನೆಯನ್ನು ಕೊಂಚವಾದರೂ ಉಳಿಸಿಕೊಂಡ ಅದರ ಚರಟ ಕುದಿಸಿ ಮಾಡಿದ ಕಾಫಿಯ ಸೇವನೆ ನಮಗೆ. ಇವೆಲ್ಲದರ ತಯಾರಿಯೂ ನೆನಪಾಗುತ್ತದೆ. ಕಾಫಿ ಬೀಜವನ್ನು ಬ್ಯಾರಿಯೊಬ್ಬರು ತಿಂಗಳಿಗೊಮ್ಮೆ ನಮಗೆ ತಂದುಕೊಡುತ್ತಿದ್ದರು. ಈ ವಿಶೇಷ ಪದಾರ್ಥಗಳೆಲ್ಲವನ್ನೂ ಕಡವಾಗಿ ನಾವು ಪಡೆಯುವುದು ವರ್ಷಕ್ಕೊಮ್ಮೆ ಅಂದರೆ, ದೀಪಾವಳಿಯಿಂದ ಇನ್ನೊಂದು ದೀಪಾವಳಿಗೆ, ಯುಗಾದಿಯಿಂದ ಇನ್ನೊಂದು ಯುಗಾದಿಗೆ, ಗೌರಿ ಹಬ್ಬದಿಂದ ಇನ್ನೊಂದು ಗೌರಿ ಹಬ್ಬದವರೆಗೆ ಈ ಕಡದ ಅವಧಿ. ನಾವು ಬೆಳೆದ ಅಡಿಕೆಯನ್ನೋ, ಭತ್ತವನ್ನೋ ಬದಲಿಗೆ ಕೊಟ್ಟು ಕಡವನ್ನು ತೀರಿಸುತ್ತಿದ್ದರು. ಜರಿ ಟೋಪಿ ತೊಟ್ಟ ಬ್ಯಾರಿ ಬಂದಾಗಲೆಲ್ಲ ನಮಗೆ ಸಕ್ಕರೆಯಿಂದ ಮಾಡಿದ ಮಿಠಾಯಿ ಪುಕ್ಕಟೆ ಸಿಗುತ್ತಿತ್ತು. ನನ್ನ ಭಯ ನಿವಾರಣೆಗೆಂದು ಎಂದೋ ಒಮ್ಮೆ ಕರಡಿ ಆಡಿಸುವವನು ತಂದ ಕಡುಕಪ್ಪು ಕರಡಿ ಮೇಲೆ ನನ್ನನ್ನು ಕೂಡಿಸಿ ಅಂಗಳ ಸುತ್ತಿಸಿದ್ದೂ ನೆನಪಿದೆ. ಕೈಯಲ್ಲಿ ಕಾಸಾಡದ ಆ ಕಾಲದಲ್ಲಿ ಹಲವು ಸಾರಿ ಮನೆಯಲ್ಲಿ ಎಲ್ಲರಿಗೂ ಕಾಫಿ ಮಾಡುವಷ್ಟು ಅನುಕೂಲ ಇರುತ್ತಿರಲಿಲ್ಲ. ಕೆಲವೊಮ್ಮೆ ಅಮ್ಮ ಸ್ವಲ್ಪ ಕಾಫಿ ಪುಡಿಯಲ್ಲಿ ಒಂದು ಲೋಟ ಕಾಫಿ ಮಾಡಿ ಅಪ್ಪನಿಗೆ ಕೊಟ್ಟು, ಆ ಕಾಫಿ ಮಾಡಿದ ಚರಟದಲ್ಲಿ ನನಗೆ, ತನಗೆ ಮತ್ತು ನನ್ನಜ್ಜನಿಗೆ ಕೊಡುತ್ತಿದ್ದರು. ಅಜ್ಜ ಮನೆಗೆ ಹಿರಿಯರಾದ್ದರಿಂದ 'ನನಗೆ ಚರಟದಲ್ಲಿ ಕಾಫಿಯೋ?' ಅಂತ ಕೇಳಿದ್ದಿದೆ.

ಕಾಫಿ ಕಡವನ್ನು ಯಾವುದರಿಂದ ತೀರಿಸಲಾಗುತ್ತದೆ?

1. ಕರಡಿಯಿಂದ
2. ಅಡಿಕೆ-ಭತ್ತದಿಂದ
3. ಲೋಟದಿಂದ
4. ಚರಟದಿಂದ

**Options :**

485584133713. 1  
485584133714. 2  
485584133715. 3  
485584133716. 4

**Question Number : 65 Question Id : 48558433430 Question Type : MCQ Option Shuffling : No Is Question Mandatory : No Calculator : None Response Time : N.A Think Time : N.A Minimum Instruction Time : 0**

**Correct Marks : 5 Wrong Marks : 1**

**Question Key Details :**

Key	Value
Comprehension	Comp3

ಈ ಕೆಳಕಂಡ ಪ್ರಶ್ನೆಗಳಿಗೆ ವಾಕ್ಯ ಸಮುಚ್ಚಯವನ್ನು ಆಧರಿಸಿ ಸರಿಯಾದ ಉತ್ತರ ಆಯ್ಕೆ ಮಾಡಿ:  
ಕೆರೆಕೊಪ್ಪದಲ್ಲಿ ನಮಗೆಲ್ಲಾ ಚರಟದ ಕಾಫಿ. ಆದರೆ ಕೆಲವು ಸಾರಿ ಅಜ್ಜಯ್ಯನಿಗೆ, ನನ್ನ ತಂದೆ ಶಾನುಭೋಗರಿಗೆ ಮತ್ತು ಅವರ ಗೆಳೆಯರಾದ ಊರಿನ ಪಟೇಲರಿಗೆ ಮಾತ್ರ 'ಒರಿಜಿನಲ್' ಕಾಫಿ ಪುಡಿಯ ಕಾಫಿ. ಕಾಫಿ ಬೀಜಗಳನ್ನು ಆಗಲೇ ಹುರಿದು, ಆಗಲೇ ಪುಡಿ ಮಾಡಿ, ಆಗಲೇ ಕುದಿಯುವ ನೀರಿಗೆ ಬೆರೆಸಿ, ಮುಚ್ಚಿಟ್ಟು, ಅದು ಗಸಿ ಇಳಿಯುವಷ್ಟು ಹೊತ್ತು ಕಾದು, ಅದಕ್ಕಾಗಿಯೇ ಇದ್ದ ಬಟ್ಟೆಗೆ ಸುರಿದು, ಹಿಂಡಿ, ಡಿಸಾಕ್ಟನ್ ಇಳಿಯುವಾಗ ಕಳೆದುಕೊಂಡ ಉಷ್ಣಾಂಶವನ್ನು ಬಿಸಿ ಬಿಸಿ ಎಮ್ಮೆ ಹಾಲು ಬೆರೆಸಿ ಹದಮಾಡಿ, ಕಾಫಿ ಮಾಡುವುದು ಸಾಮಾನ್ಯವಾಗಿತ್ತು. ಈ ಕಾಫಿಯನ್ನು ಫಳಫಳ ಹೊಳೆಯುವ ಒಂದು ಹಿತ್ತಾಳೆ ಲೋಟದಿಂದ ಇನ್ನೊಂದು ಲೋಟಕ್ಕೆ ನೋರೆ ಬರುವಂತೆ ಹಲವು ಸಾರಿ ಹುಯ್ದು ಕುದಿಯಲು ಅಗತ್ಯವಾದ ಬಿಸಿಗೆ ಅದನ್ನು ಇಳಿಸಿ, ಸೆರಗು ಮುಚ್ಚಿದ ಕೈಯ ಮೇಲೆ ಅದನ್ನು ಇಟ್ಟುಕೊಂಡು ಹಸನ್ಮುಖಿಯಾಗಿ ಅಮ್ಮ ಕುದಿಯಲು ಕೊಡುತ್ತಿದ್ದರು. ಮಕ್ಕಳಿಗೂ ನನಗೂ ಎಲ್ಲೋ ಒಂದೊಂದು ಸಾರಿ ಈ ಕಾಫಿಯ ಪುಣ್ಯ ಸಿಗುತ್ತಿತ್ತು. ನಿತ್ಯ ಈ ಕಾಫಿಯ ಘಮಘಮದ ವಾಸನೆಯನ್ನು ಕೊಂಚವಾದರೂ ಉಳಿಸಿಕೊಂಡ ಅದರ ಚರಟ ಕುದಿಸಿ ಮಾಡಿದ ಕಾಫಿಯ ಸೇವನೆ ನಮಗೆ. ಇವೆಲ್ಲದರ ತಯಾರಿಯೂ ನೆನಪಾಗುತ್ತದೆ. ಕಾಫಿ ಬೀಜವನ್ನು ಬ್ಯಾರಿಯೊಬ್ಬರು ತಿಂಗಳಿಗೊಮ್ಮೆ ನಮಗೆ ತಂದುಕೊಡುತ್ತಿದ್ದರು. ಈ ವಿಶೇಷ ಪದಾರ್ಥಗಳೆಲ್ಲವನ್ನೂ ಕಡವಾಗಿ ನಾವು ಪಡೆಯುವುದು ವರ್ಷಕ್ಕೊಮ್ಮೆ ಅಂದರೆ, ದೀಪಾವಳಿಯಿಂದ ಇನ್ನೊಂದು ದೀಪಾವಳಿಗೆ, ಯುಗಾದಿಯಿಂದ ಇನ್ನೊಂದು ಯುಗಾದಿಗೆ, ಗೌರಿ ಹಬ್ಬದಿಂದ ಇನ್ನೊಂದು ಗೌರಿ ಹಬ್ಬದವರೆಗೆ ಈ ಕಡದ ಅವಧಿ. ನಾವು ಬೆಳೆದ ಅಡಿಕೆಯನ್ನೋ, ಭತ್ತವನ್ನೋ ಬದಲಿಗೆ ಕೊಟ್ಟು ಕಡವನ್ನು ತೀರಿಸುತ್ತಿದ್ದರು. ಜರಿ ಟೋಪಿ ತೊಟ್ಟ ಬ್ಯಾರಿ ಬಂದಾಗಲೆಲ್ಲ ನಮಗೆ ಸಕ್ಕರೆಯಿಂದ ಮಾಡಿದ ಮಿಠಾಯಿ ಪುಕ್ಕಟೆ ಸಿಗುತ್ತಿತ್ತು. ನನ್ನ ಭಯ ನಿವಾರಣೆಗೆಂದು ಎಂದೋ ಒಮ್ಮೆ ಕರಡಿ ಆಡಿಸುವವನು ತಂದ ಕಡುಕಪ್ಪು ಕರಡಿ ಮೇಲೆ ನನ್ನನ್ನು ಕೂಡಿಸಿ ಅಂಗಳ ಸುತ್ತಿಸಿದ್ದೂ ನೆನಪಿದೆ.

ಕೈಯಲ್ಲಿ ಕಾಸಾಡದ ಆ ಕಾಲದಲ್ಲಿ ಹಲವು ಸಾರಿ ಮನೆಯಲ್ಲಿ ಎಲ್ಲರಿಗೂ ಕಾಫಿ ಮಾಡುವಷ್ಟು ಅನುಕೂಲ ಇರುತ್ತಿರಲಿಲ್ಲ. ಕೆಲವೊಮ್ಮೆ ಅಮ್ಮ ಸ್ವಲ್ಪ ಕಾಫಿ ಪುಡಿಯಲ್ಲಿ ಒಂದು ಲೋಟ ಕಾಫಿ ಮಾಡಿ ಅಪ್ಪನಿಗೆ ಕೊಟ್ಟು, ಆ ಕಾಫಿ ಮಾಡಿದ ಚರಟದಲ್ಲಿ ನನಗೆ, ತನಗೆ ಮತ್ತು ನನ್ನಜ್ಜನಿಗೆ ಕೊಡುತ್ತಿದ್ದರು. ಅಜ್ಜ ಮನೆಗೆ ಹಿರಿಯರಾದ್ದರಿಂದ 'ನನಗೆ ಚರಟದಲ್ಲಿ ಕಾಫಿಯೋ?' ಅಂತ ಕೇಳಿದ್ದಿದೆ.

ಅಮ್ಮ ಅಜ್ಜನಿಗೆ ಚರಟದಲ್ಲಿ ನೀಡುತ್ತಿದ್ದ ಪದಾರ್ಥ .....

1. ಅಡಿಕೆ
2. ಭತ್ತ
3. ಮಿಠಾಯಿ
4. ಕಾಫಿ

**Options :**

485584133717. 1  
485584133718. 2  
485584133719. 3  
485584133720. 4

**Sub-Section Number :**

4

**Sub-Section Id :**

4855842417

**Question Shuffling Allowed :**

Yes

**Is Section Default? :**

null

**Question Number : 66 Question Id : 48558433431 Question Type : MCQ Option Shuffling : No Is Question Mandatory : No Calculator : None Response Time : N.A Think Time : N.A Minimum Instruction Time : 0**

**Correct Marks : 5 Wrong Marks : 1**

**Question Key Details :**

Key	Value
-----	-------

Comprehension	MCQ
---------------	-----

'ಕಾರ್ಮೋಡ' ಈ ಪದದಲ್ಲಿದ್ದಿರುವ ಗುಣವಾಚಕವನ್ನು ಗುರುತಿಸಿ

1. ಮೋಡ
2. ಕಾರು
3. ಕರಿಮೋಡ
4. ಕಪ್ಪು

**Options :**

485584133721. 1  
485584133722. 2  
485584133723. 3  
485584133724. 4

**Question Number : 67 Question Id : 48558433432 Question Type : MCQ Option Shuffling : No Is Question Mandatory : No Calculator : None Response Time : N.A Think Time : N.A Minimum Instruction Time : 0**

**Correct Marks : 5 Wrong Marks : 1**

**Question Key Details :**

Key	Value
Comprehension	MCQ

**ಹಳೆಯ** ಆಭರಣ: ಗೆರೆ ಎಳೆದಿರುವ ಪದ.....

1. ಭಾವನಾಮ
2. ಪ್ರಕಾರವಾಚಕ
3. ಗುಣವಾಚಕ
4. ಸಂಖ್ಯಾವಾಚಕ

**Options :**

485584133725. 1  
485584133726. 2  
485584133727. 3  
485584133728. 4

**Question Number : 68 Question Id : 48558433433 Question Type : MCQ Option Shuffling : No Is Question Mandatory : No Calculator : None Response Time : N.A Think Time : N.A Minimum Instruction Time : 0**

**Correct Marks : 5 Wrong Marks : 1**

**Question Key Details :**

Key	Value
Comprehension	MCQ

ಅ + ಭ್ + ಇ + ವ್ + ಯ್ + ಅ + ಕ್ + ತ್ + ಇ - ಈ ಗುಣಿತಾಕ್ಷರಗಳು ಕೂಡಿ ಆಗುವ ಪದ ಯಾವುದು

1. ಅಭಿಪ್ರಾಯ
2. ಅಭಿವ್ಯಕ್ತ
3. ಅಭಿಯಾನ
4. ಅಭಿವ್ಯಕ್ತಿ

**Options :**

485584133729. 1  
485584133730. 2  
485584133731. 3  
485584133732. 4

**Question Number : 69 Question Id : 48558433434 Question Type : MCQ Option Shuffling : No Is Question Mandatory : No Calculator : None Response Time : N.A Think Time : N.A Minimum Instruction Time : 0**

**Correct Marks : 5 Wrong Marks : 1**

**Question Key Details :**

Key	Value
Comprehension	MCQ

'ಕಲ್ಲುಮಂಟಪ' - ಈ ಶಬ್ದವನ್ನು ಬಿಡಿಸಿ ಬರೆಯುವ ಸರಿಯಾದ ಕ್ರಮ

1. ಕಲ್ಲಿನ + ಮಂಟಪ
2. ಕಲ್ಲು + ಮಂಟಪ
3. ಕಲ್ಲುಗಳ + ಮಂಟಪ
4. ಕಲ್ಲುಗಳಿಂದ + ಮಂಟಪ

**Options :**

485584133733. 1  
485584133734. 2  
485584133735. 3  
485584133736. 4

**Question Number : 70 Question Id : 48558433435 Question Type : MCQ Option Shuffling : No Is Question Mandatory : No Calculator : None Response Time : N.A Think Time : N.A Minimum Instruction Time : 0**

**Correct Marks : 5 Wrong Marks : 1**

**Question Key Details :**

Key	Value
Comprehension	MCQ

"ಸಂಸ್ಕೃತಿ" ಈ ಶಬ್ದದಲ್ಲಿರುವ ಗುಣಿತಾಕ್ಷರಗಳು ಯಾವುವು?

1. ಸ್ + ಮ್ + ಅ + ಸ್ + ಕ್ + ಮ್ + ತ್ + ಇ
2. ಸ್ + ಅಂ + ಸ್ + ಕ್ + ಇ + ತ್ + ಇ
3. ಸ್ + ಮ್ + ಅ + ಸ್ + ಇ + ತ್ + ಅ
4. ಸ್ + ಅಂ + ಅ + ಸ್ + ಇ + ತ್ + ಅ

**Options :**

485584133737. 1  
485584133738. 2  
485584133739. 3  
485584133740. 4

**Question Number : 71 Question Id : 48558433436 Question Type : MCQ Option Shuffling : No Is Question Mandatory : No Calculator : None Response Time : N.A Think Time : N.A Minimum Instruction Time : 0**

**Correct Marks : 5 Wrong Marks : 1**

**Question Key Details :**

Key	Value
Comprehension	MCQ

ಮನಸ್ + ಶುದ್ಧಿ - ಈ ಪದಗಳನ್ನು ಕೂಡಿಸಿ ಬರೆದಾಗ ....

1. ಮನಸ್ಸುದ್ಧಿ
2. ಮನಸ್ಸಿನ ಶುದ್ಧಿ
3. ಮನಶುದ್ಧಿ
4. ಮನಶ್ಶುದ್ಧಿ

**Options :**

485584133741. 1  
485584133742. 2  
485584133743. 3  
485584133744. 4

**Question Number : 72 Question Id : 48558433437 Question Type : MCQ Option Shuffling : No Is Question Mandatory : No Calculator : None Response Time : N.A Think Time : N.A Minimum Instruction Time : 0**

**Correct Marks : 5 Wrong Marks : 1**

**Question Key Details :**

Key	Value
Comprehension	MCQ

"ವ್ಯವಹಾರಿಕ" ಈ ಶಬ್ದದ ಶುದ್ಧರೂಪ

1. ವ್ಯಾಹಾರಿಕ
2. ವ್ಯಾವಹಾರಿಕ
3. ವ್ಯಾಪಹಾರಿಕ
4. ವೈವಹಾರಿಕ

**Options :**

485584133745. 1  
485584133746. 2  
485584133747. 3  
485584133748. 4

**Question Number : 73 Question Id : 48558433438 Question Type : MCQ Option Shuffling : No Is Question Mandatory : No Calculator : None Response Time : N.A Think Time : N.A Minimum Instruction Time : 0**

**Correct Marks : 5 Wrong Marks : 1**

**Question Key Details :**

Key	Value
Comprehension	MCQ

ಅನ್ನ ಕೊತಕೊತನೆ ಕುದಿಯುತ್ತಿತ್ತು - ಈ ವಾಕ್ಯದಲ್ಲಿ ಅಡಿಗರೆ ಎಳೆದಿರುವ ಪದ

1. ಅನುಕರಣಾವ್ಯಯ
2. ಕೃದಂತನಾಮ
3. ಕ್ರಿಯಾಧಾತು
4. ಕಾಲಸೂಚಕ

**Options :**

485584133749. 1  
485584133750. 2  
485584133751. 3  
485584133752. 4

**Question Number : 74 Question Id : 48558433439 Question Type : MCQ Option Shuffling : No Is Question Mandatory : No Calculator : None Response Time : N.A Think Time : N.A Minimum Instruction Time : 0**

**Correct Marks : 5 Wrong Marks : 1**

**Question Key Details :**

Key	Value
Comprehension	MCQ

'ಅವರು ಉರುಳಿಉರುಳಿ ಸೇವೆ ಸಲ್ಲಿಸಿದರು' - ಈ ವಾಕ್ಯದಲ್ಲಿ ಅಡಿಗರೆ ಎಳೆದಿರುವ ಪದ

1. ಜೋಡಿಪದ
2. ಅನುಕರಣಾವ್ಯಯ
3. ಪ್ರತ್ಯಯ
4. ದ್ವಿರುಕ್ತಿ

**Options :**

485584133753. 1  
485584133754. 2  
485584133755. 3  
485584133756. 4

**Question Number : 75 Question Id : 48558433440 Question Type : MCQ Option Shuffling : No Is Question Mandatory : No Calculator : None Response Time : N.A Think Time : N.A Minimum Instruction Time : 0**

**Correct Marks : 5 Wrong Marks : 1**

**Question Key Details :**

Key	Value
Comprehension	MCQ

ಕೊಟ್ಟಿರುವ ಪದಗಳಲ್ಲಿ ಅಚ್ಚಗನ್ನಡದ ಶಬ್ದ ಗುರುತಿಸಿ

1. ಇಲಾಖೆ
2. ಆಕಳು
3. ಲೂಟಿ
4. ದುಬಾರಿ

**Options :**

485584133757. 1  
485584133758. 2  
485584133759. 3  
485584133760. 4

**Question Number : 76 Question Id : 48558433441 Question Type : MCQ Option Shuffling : No Is Question Mandatory : No Calculator : None Response Time : N.A Think Time : N.A Minimum Instruction Time : 0**

**Correct Marks : 5 Wrong Marks : 1**

**Question Key Details :**

Key	Value
Comprehension	MCQ

ಗುಂಪಿಗೆ ಸೇರದ ಪದವನ್ನು ಗುರುತಿಸಿ

1. ರೈಲು
2. ಬಸ್ಸು
3. ಸ್ಕೂಲ್
4. ಮರ

**Options :**

485584133761. 1  
485584133762. 2  
485584133763. 3  
485584133764. 4

**Question Number : 77 Question Id : 48558433442 Question Type : MCQ Option Shuffling : No Is Question Mandatory : No Calculator : None Response Time : N.A Think Time : N.A Minimum Instruction Time : 0**

**Correct Marks : 5 Wrong Marks : 1**

**Question Key Details :**

Key	Value
Comprehension	MCQ

ಪಟ್ಟಿ - I ನ್ನು ಪಟ್ಟಿ - II ರೊಂದಿಗೆ ಹೊಂದಿಸಿ ಬರೆಯಿರಿ

ಪಟ್ಟಿ I		ಪಟ್ಟಿ II	
A.	ಪಂಪ	I.	ಹದಿಬದೆಯ ಧರ್ಮ
B.	ಕುಮಾರವ್ಯಾಸ	II.	ನಳಚರಿತ್ರೆ
C.	ಕನಕದಾಸ	III.	ಆದಿಪುರಾಣ
D.	ಸಂಜಿಹೊನ್ನಮ್ಮ	IV.	ಕರ್ಣಾಟಭಾರತ ಕಥಾಮಂಜರಿ

ಈ ಕೆಳಗಿನ ಆಯ್ಕೆಗಳಿಂದ ಸರಿಯಾದ ಉತ್ತರವನ್ನು ಆರಿಸಿ:

1. A-III, B-I, C-IV, D-II
2. A-I, B-II, C-III, D-IV
3. A-IV, B-III, C-II, D-I
4. A-III, B-IV, C-II, D-I

**Options :**

485584133765. 1  
485584133766. 2  
485584133767. 3  
485584133768. 4

**Question Number : 78 Question Id : 48558433443 Question Type : MCQ Option Shuffling : No Is Question Mandatory : No Calculator : None Response Time : N.A Think Time : N.A Minimum Instruction Time : 0**

**Correct Marks : 5 Wrong Marks : 1**

**Question Key Details :**

Key	Value
Comprehension	MCQ



"ಶ್ರೀ ರಾಮಾಯಣ ದರ್ಶನಂ" ಈ ಕೃತಿಯ ರಚನಕಾರರು

1. ಮಾಸ್ತಿ ವೆಂಕಟೇಶ ಅಯ್ಯಂಗಾರ್
2. ಕೆ.ವಿ. ಪುಟ್ಟಪ್ಪ
3. ಡಿ.ವಿ. ಗುಂಡಪ್ಪ
4. ಶಿವರಾಮ ಕಾರಂತ

**Options :**

485584133769. 1  
485584133770. 2  
485584133771. 3  
485584133772. 4

**Question Number : 79 Question Id : 48558433444 Question Type : MCQ Option Shuffling : No Is Question Mandatory : No Calculator : None Response Time : N.A Think Time : N.A Minimum Instruction Time : 0**

**Correct Marks : 5 Wrong Marks : 1**

**Question Key Details :**

Key	Value
Comprehension	MCQ

**"ಶ್ರೀ ಚೆನ್ನಮಲ್ಲಿಕಾರ್ಜುನ" - ಇದು ಯಾವ ವಚನಕಾರರ ಅಂಕಿತನಾಮ?**

1. ದೇವರ ದಾಸಿಮಯ್ಯ
2. ಅಕ್ಕಮಹಾದೇವಿ
3. ಅಲ್ಲಮಪ್ರಭು
4. ಬಸವಣ್ಣ

**Options :**

485584133773. 1  
485584133774. 2  
485584133775. 3  
485584133776. 4

**Question Number : 80 Question Id : 48558433445 Question Type : MCQ Option Shuffling : No Is Question Mandatory : No Calculator : None Response Time : N.A Think Time : N.A Minimum Instruction Time : 0**

**Correct Marks : 5 Wrong Marks : 1**

**Question Key Details :**

Key	Value
Comprehension	MCQ

"ಬೀಳ್ಕೊಡು" - ಈ ಶಬ್ದದ ವಿರುದ್ಧಾರ್ಥಕ

1. ಕಳುಹಿಸು
2. ವಂದಿಸು
3. ನಮಸ್ಕರಿಸು
4. ಸ್ವಾಗತಿಸು

**Options :**

485584133777. 1  
485584133778. 2  
485584133779. 3  
485584133780. 4

**Question Number : 81 Question Id : 48558433446 Question Type : MCQ Option Shuffling : No Is Question Mandatory : No Calculator : None Response Time : N.A Think Time : N.A Minimum Instruction Time : 0**

**Correct Marks : 5 Wrong Marks : 1**

**Question Key Details :**

Key	Value
Comprehension	MCQ

"ದಿಗ್ಗಜರು" ಎನ್ನುವಲ್ಲಿ "ಗ್ಗ" ಎನ್ನುವುದು

1. ವರ್ಗೀಯ ವ್ಯಂಜನ
2. ಸಹಜ ವ್ಯಂಜನ
3. ಸ್ವಜಾತೀಯ ಸಂಯುಕ್ತಾಕ್ಷರ
4. ವಿಜಾತೀಯ ಸಂಯುಕ್ತಾಕ್ಷರ

**Options :**

485584133781. 1  
485584133782. 2  
485584133783. 3  
485584133784. 4

**Question Number : 82 Question Id : 48558433447 Question Type : MCQ Option Shuffling : No Is Question Mandatory : No Calculator : None Response Time : N.A Think Time : N.A Minimum Instruction Time : 0**

**Correct Marks : 5 Wrong Marks : 1**

**Question Key Details :**

Key	Value
Comprehension	MCQ

"ಕೈ ಬಿಸಿ ಮಾಡು" ಈ ನುಡಿಗಟ್ಟಿನ ಅರ್ಥ

1. ಶಾಖ ಕಾಯಿಸಿಕೊಳ್ಳುವುದು
2. ಕೈಯನ್ನು ಬೆಚ್ಚಗೆ ಇಟ್ಟುಕೊಳ್ಳುವುದು
3. ಲಂಚ ನೀಡುವುದು
4. ಕೈಗೆ ಕಾಫಿ ನೀಡುವುದು

**Options :**

485584133785. 1  
485584133786. 2  
485584133787. 3  
485584133788. 4

**Question Number : 83 Question Id : 48558433448 Question Type : MCQ Option Shuffling : No Is Question Mandatory : No Calculator : None Response Time : N.A Think Time : N.A Minimum Instruction Time : 0**

**Correct Marks : 5 Wrong Marks : 1**

**Question Key Details :**

Key	Value
Comprehension	MCQ

"ಹೊಸಗನ್ನಡ" - ಈ ಪದದಲ್ಲಿರುವ ಸಂಧಿಯನ್ನು ಹೆಸರಿಸಿ.

1. ಆದೇಶ ಸಂಧಿ
2. ಆಗಮ ಸಂಧಿ
3. ಲೋಪ ಸಂಧಿ
4. ಗುಣ ಸಂಧಿ

**Options :**

485584133789. 1  
485584133790. 2  
485584133791. 3  
485584133792. 4

**Question Number : 84 Question Id : 48558433449 Question Type : MCQ Option Shuffling : No Is Question Mandatory : No Calculator : None Response Time : N.A Think Time : N.A Minimum Instruction Time : 0**

**Correct Marks : 5 Wrong Marks : 1**

**Question Key Details :**

Key	Value
Comprehension	MCQ

ಇವುಗಳಲ್ಲಿ "ಜೋಡುನುಡಿ" ಅಲ್ಲದಿರುವ ಪದ \_\_\_\_\_

1. ಹಮ್ಮುಬಿಮ್ಮು
2. ನಡೆನಡೆ
3. ಲೀಲಾಜಾಲ
4. ನಡೆನುಡಿ

**Options :**

485584133793. 1  
485584133794. 2  
485584133795. 3  
485584133796. 4

**Question Number : 85 Question Id : 48558433450 Question Type : MCQ Option Shuffling : No Is Question Mandatory : No Calculator : None Response Time : N.A Think Time : N.A Minimum Instruction Time : 0**

**Correct Marks : 5 Wrong Marks : 1**

**Question Key Details :**

Key	Value
Comprehension	MCQ

"ವಿದ್ಯಾ" ಎನ್ನುವುದರ ತದ್ಭವರೂಪ \_\_\_\_\_

1. ವಿದ್ಯೆ
2. ಬಿಜ್ಜೆ
3. ಬಿದ್ಡೆ
4. ಬಿಜ್ಜಾ

**Options :**

485584133797. 1  
485584133798. 2  
485584133799. 3  
485584133800. 4

**Question Number : 86 Question Id : 48558433451 Question Type : MCQ Option Shuffling : No Is Question Mandatory : No Calculator : None Response Time : N.A Think Time : N.A Minimum Instruction Time : 0**

**Correct Marks : 5 Wrong Marks : 1**

**Question Key Details :**

Key	Value
Comprehension	MCQ

'ಧರಣಿ' ಈ ಪದದ ಅರ್ಥ

1. ಸೂರ್ಯ
2. ಆಕಾಶ
3. ಭೂಮಿ
4. ಚಂದ್ರ

**Options :**

485584133801. 1  
485584133802. 2  
485584133803. 3  
485584133804. 4

**Question Number : 87 Question Id : 48558433452 Question Type : MCQ Option Shuffling : No Is Question Mandatory : No Calculator : None Response Time : N.A Think Time : N.A Minimum Instruction Time : 0**

**Correct Marks : 5 Wrong Marks : 1**

**Question Key Details :**

Key	Value
Comprehension	MCQ

ಈ ಕೆಳಗಿನ ಪದಗಳಲ್ಲಿ ಯಾವುದು 'ನೀರು' ಪದದ ಸಮಾನಾರ್ಥಕವಲ್ಲ?

1. ಸಲಿಲ
2. ಉರಗ
3. ಜಲ
4. ಉದಕ

**Options :**

485584133805. 1  
485584133806. 2  
485584133807. 3  
485584133808. 4

**Question Number : 88 Question Id : 48558433453 Question Type : MCQ Option Shuffling : No Is Question Mandatory : No Calculator : None Response Time : N.A Think Time : N.A Minimum Instruction Time : 0**

**Correct Marks : 5 Wrong Marks : 1**

**Question Key Details :**

Key	Value
Comprehension	MCQ

'ಕಾಂತಾರ' ಪದದ ಸರಿಯಾದ ನಾನಾರ್ಥ

1. ಕಾಡು-ಅರಣ್ಯ
2. ವನ-ಕಾಡು
3. ಕಾಡು-ಪೀಡಿಸು
4. ಬನ-ಕಾಡು

**Options :**

485584133809. 1  
485584133810. 2  
485584133811. 3  
485584133812. 4

**Question Number : 89 Question Id : 48558433454 Question Type : MCQ Option Shuffling : No Is Question Mandatory : No Calculator : None Response Time : N.A Think Time : N.A Minimum Instruction Time : 0**

**Correct Marks : 5 Wrong Marks : 1**

**Question Key Details :**

Key	Value
Comprehension	MCQ

'ಹೊಳೆ' ಇದಕ್ಕೆ ಈ ಕೆಳಗಿನವುಗಳಲ್ಲಿ ಯಾವ ಪದ ಹೊಂದುವುದಿಲ್ಲ?

1. ಸಮುದ್ರ
2. ನದಿ
3. ಕಾಂತಿ
4. ಪ್ರಕಾಶ

**Options :**

485584133813. 1  
485584133814. 2  
485584133815. 3  
485584133816. 4

**Question Number : 90 Question Id : 48558433455 Question Type : MCQ Option Shuffling : No Is Question Mandatory : No Calculator : None Response Time : N.A Think Time : N.A Minimum Instruction Time : 0**

**Correct Marks : 5 Wrong Marks : 1**

**Question Key Details :**

Key	Value
Comprehension	MCQ

'ಯೌವನ' ಇದರ ತದ್ಭವ ರೂಪ

1. ಯೌವ್ಯನ
2. ಜವ್ಯನ
3. ತಾರುಣ್ಯ
4. ತರುಣ

**Options :**

485584133817. 1  
485584133818. 2  
485584133819. 3  
485584133820. 4

**Question Number : 91 Question Id : 48558433456 Question Type : MCQ Option Shuffling : No Is Question Mandatory : No Calculator : None Response Time : N.A Think Time : N.A Minimum Instruction Time : 0**

**Correct Marks : 5 Wrong Marks : 1**

**Question Key Details :**

Key	Value
Comprehension	MCQ

'ಹಂಸ' ಪದದ ತದ್ಭವ ರೂಪ

1. ಅಂಶ
2. ಅಂಸ
3. ಅಂಚು
4. ಅಂಚೆ

**Options :**

485584133821. 1  
485584133822. 2  
485584133823. 3  
485584133824. 4

**Question Number : 92 Question Id : 48558433457 Question Type : MCQ Option Shuffling : No Is Question Mandatory : No Calculator : None Response Time : N.A Think Time : N.A Minimum Instruction Time : 0**

**Correct Marks : 5 Wrong Marks : 1**

**Question Key Details :**

Key	Value
Comprehension	MCQ

'ಯಾವನು' - ಈ ಪದದ ಲಿಂಗವನ್ನು ಗುರುತಿಸಿ

1. ನಪುಂಸಕ ಲಿಂಗ
2. ಪುಲ್ಲಿಂಗ
3. ವಾಚ್ಯಲಿಂಗ
4. ಸ್ತ್ರೀಲಿಂಗ

**Options :**

485584133825. 1  
485584133826. 2  
485584133827. 3  
485584133828. 4

**Question Number : 93 Question Id : 48558433458 Question Type : MCQ Option Shuffling : No Is Question Mandatory : No Calculator : None Response Time : N.A Think Time : N.A Minimum Instruction Time : 0**

**Correct Marks : 5 Wrong Marks : 1**

**Question Key Details :**

Key	Value
Comprehension	MCQ

'ನಾನು, ನಾವು...' ಇವು?

1. ಪ್ರಥಮ ಪುರುಷ ಸರ್ವನಾಮಗಳು
2. ಮಧ್ಯಮ ಪುರುಷ ಸರ್ವನಾಮಗಳು
3. ಉತ್ತಮ ಪುರುಷ ಸರ್ವನಾಮಗಳು
4. ಆತ್ಮಾರ್ಥಕ ಸರ್ವನಾಮಗಳು

**Options :**

485584133829. 1  
485584133830. 2  
485584133831. 3  
485584133832. 4

**Question Number : 94 Question Id : 48558433459 Question Type : MCQ Option Shuffling : No Is Question Mandatory : No Calculator : None Response Time : N.A Think Time : N.A Minimum Instruction Time : 0**

**Correct Marks : 5 Wrong Marks : 1**

**Question Key Details :**

Key	Value
Comprehension	MCQ



'ಎದ್ದೇಳು' ಇಲ್ಲಿರುವ ಕ್ರಿಯಾಧಾತು -

1. ಎಳು
2. ಏಳು
3. ಎದ್ದರು
4. ಎದ್ದು

**Options :**

485584133833. 1  
485584133834. 2  
485584133835. 3  
485584133836. 4

**Question Number : 95 Question Id : 48558433460 Question Type : MCQ Option Shuffling : No Is Question Mandatory : No Calculator : None Response Time : N.A Think Time : N.A Minimum Instruction Time : 0**

**Correct Marks : 5 Wrong Marks : 1**

**Question Key Details :**

Key	Value
Comprehension	MCQ

'ವರ್ತಮಾನ'ವನ್ನು ಸೂಚಿಸುವ ಕ್ರಿಯಾಪದ

1. ಓದುವರು
2. ಓದುತ್ತಿದ್ದಾರೆ
3. ಓದಿದರು
4. ಬರೆವರು

**Options :**

485584133837. 1  
485584133838. 2  
485584133839. 3  
485584133840. 4

**Question Number : 96 Question Id : 48558433461 Question Type : MCQ Option Shuffling : No Is Question Mandatory : No Calculator : None Response Time : N.A Think Time : N.A Minimum Instruction Time : 0**

**Correct Marks : 5 Wrong Marks : 1**

**Question Key Details :**

Key	Value
Comprehension	MCQ

ಅನ್ವರ್ಥ ನಾಮಕ್ಕೆ ಉದಾಹರಣೆ...

1. ಕಾವೇರಿ
2. ಕುರುಡ
3. ಹುಡುಗ
4. ಶಾಲೆ

**Options :**

485584133841. 1  
485584133842. 2  
485584133843. 3  
485584133844. 4

**Question Number : 97 Question Id : 48558433462 Question Type : MCQ Option Shuffling : No Is Question Mandatory : No Calculator : None Response Time : N.A Think Time : N.A Minimum Instruction Time : 0**

**Correct Marks : 5 Wrong Marks : 1**

**Question Key Details :**

Key	Value
Comprehension	MCQ

ಇವುಗಳಲ್ಲಿ 'ದಿಗ್ವಾಚಕ' ಶಬ್ದಕ್ಕೆ ಉದಾಹರಣೆ \_\_\_\_\_

1. ಕಪ್ಪು
2. ಬಡತನ
3. ಕಾವೇರಿ
4. ಮೂಡಣ

**Options :**

485584133845. 1  
485584133846. 2  
485584133847. 3  
485584133848. 4

**Question Number : 98 Question Id : 48558433463 Question Type : MCQ Option Shuffling : No Is Question Mandatory : No Calculator : None Response Time : N.A Think Time : N.A Minimum Instruction Time : 0**

**Correct Marks : 5 Wrong Marks : 1**

**Question Key Details :**

Key	Value
Comprehension	MCQ

ಹೊಂದಿಸಿ ಬರೆಯಿರಿ

ಪಟ್ಟಿ - I		ಪಟ್ಟಿ - II	
A.	ಪುಸ್ತಕದಲ್ಲಿ	I.	ಚತುರ್ಥಿ ವಿಭಕ್ತಿ ಪ್ರತ್ಯಯ
B.	ಮಗುವಿಗೆ	II.	ಷಷ್ಠಿ ವಿಭಕ್ತಿ ಪ್ರತ್ಯಯ
C.	ಜನಗಳ	III.	ಸಪ್ತಮಿ ವಿಭಕ್ತಿ ಪ್ರತ್ಯಯ
D.	ಬಾವಿಯಿಂದ	IV.	ತ್ವತೀಯ ವಿಭಕ್ತಿ ಪ್ರತ್ಯಯ

ಕೆಳಗೆ ನೀಡಿರುವ ಆಯ್ಕೆಗಳಿಂದ ಸರಿಯಾದ ಉತ್ತರವನ್ನು ಆರಿಸಿ:

1. A-I, B-II, C-IV, D-II
2. A-IV, B-II, C-I, D-III
3. A-III, B-I, C-II, D-IV
4. A-II, B-IV, C-III, D-I

**Options :**

485584133849. 1  
485584133850. 2  
485584133851. 3  
485584133852. 4

**Question Number : 99 Question Id : 48558433464 Question Type : MCQ Option Shuffling : No Is Question Mandatory : No Calculator : None Response Time : N.A Think Time : N.A Minimum Instruction Time : 0**

**Correct Marks : 5 Wrong Marks : 1**

**Question Key Details :**

Key	Value
Comprehension	MCQ

ಶಿಕ್ಷಕರು ಪಾಠವನ್ನು ಬೋಧಿಸಿದರು.

ಅಡಿಗೆರೆ ಎಳೆದಿರುವ ಪದದಲ್ಲಿರುವ ವಿಭಕ್ತಿ ಪ್ರತ್ಯಯ

1. ದ್ವಿತೀಯ
2. ತೃತೀಯ
3. ಪ್ರಥಮ
4. ಪಂಚಮಿ

**Options :**

485584133853. 1  
485584133854. 2  
485584133855. 3  
485584133856. 4

**Question Number : 100 Question Id : 48558433465 Question Type : MCQ Option Shuffling : No Is Question Mandatory : No Calculator : None Response Time : N.A Think Time : N.A Minimum Instruction Time : 0**

**Correct Marks : 5 Wrong Marks : 1**

**Question Key Details :**

Key	Value
Comprehension	MCQ

ಕೊಟ್ಟಿರುವ ಪದಗಳಲ್ಲಿ ಅರ್ಥಪೂರ್ಣ ವಾಕ್ಯದ ಕ್ರಮ

- ತಿನ್ನತೊಡಗಿತು
- ಅಂಗಡಿಯವನು
- ಇಲಿಗಳನ್ನು
- ಸಾಕಿದ ಬೆಕ್ಕು
- ಹಿಡಿದು

ಈ ಕೆಳಗೆ ನೀಡಿರುವ ಆಯ್ಕೆಗಳಿಂದ ಸರಿಯಾದ ಉತ್ತರವನ್ನು ಆರಿಸಿ:

- ABCED
- BDCEA
- CDBAE
- BDAEC

**Options :**

485584133857. 1
485584133858. 2
485584133859. 3
485584133860. 4

## Japanese

<b>Group Number :</b>	5
<b>Group Id :</b>	485584743
<b>Group Maximum Duration :</b>	45
<b>Group Minimum Duration :</b>	45
<b>Show Attended Group? :</b>	No
<b>Edit Attended Group? :</b>	No
<b>Break time :</b>	0
<b>Group Marks :</b>	200
<b>Is this Group for Examiner? :</b>	No
<b>Examiner permission :</b>	Cant View
<b>Show Progress Bar? :</b>	No

## Japanese

<b>Section Id :</b>	485584857
<b>Section Number :</b>	1
<b>Section type :</b>	Online
<b>Mandatory or Optional :</b>	Mandatory
<b>Number of Questions :</b>	50
<b>Number of Questions to be attempted :</b>	40
<b>Section Marks :</b>	200
<b>Enable Mark as Answered Mark for Review and Clear Response :</b>	Yes
<b>Maximum Instruction Time :</b>	0
<b>Sub-Section Number :</b>	1

**Sub-Section Id :** 4855842418  
**Question Shuffling Allowed :** No  
**Is Section Default? :** null  
**Sub-Section Number :** 2  
**Sub-Section Id :** 4855842419  
**Question Shuffling Allowed :** No  
**Is Section Default? :** null  
**Sub-Section Number :** 3  
**Sub-Section Id :** 4855842420  
**Question Shuffling Allowed :** No  
**Is Section Default? :** null  
**Sub-Section Number :** 4  
**Sub-Section Id :** 4855842421  
**Question Shuffling Allowed :** Yes  
**Is Section Default? :** null

## Entrepreneurship

**Group Number :** 6  
**Group Id :** 485584744  
**Group Maximum Duration :** 45  
**Group Minimum Duration :** 45  
**Show Attended Group? :** No  
**Edit Attended Group? :** No  
**Break time :** 0  
**Group Marks :** 200  
**Is this Group for Examiner? :** No  
**Examiner permission :** Cant View  
**Show Progress Bar? :** No

## Entrepreneurship

**Section Id :** 485584858  
**Section Number :** 1  
**Section type :** Online  
**Mandatory or Optional :** Mandatory  
**Number of Questions :** 50  
**Number of Questions to be attempted :** 40  
**Section Marks :** 200  
**Enable Mark as Answered Mark for Review and Clear Response :** Yes  
**Maximum Instruction Time :** 0  
**Sub-Section Number :** 1  
**Sub-Section Id :** 4855842422  
**Question Shuffling Allowed :** Yes  
**Is Section Default? :** null

**Question Number : 101 Question Id : 48558433466 Question Type : MCQ Option Shuffling : No Is Question Mandatory : No Calculator : None Response Time : N.A Think Time : N.A Minimum Instruction Time : 0 Correct Marks : 5 Wrong Marks : 1**

**Question Key Details :**

Key	Value
Comprehension	MCQ

Creativity process occurs in the following sequence:

- A. Illumination
- B. Preparation
- C. Verification
- D. Idea Germination
- E. Incubation

Choose the correct answer from the options given below:

- 1. B, A, D, C, E
- 2. D, B, E, A, C
- 3. B, D, A, E, C
- 4. A, C, D, B, E

**Options :**

- 485584133861. 1
- 485584133862. 2
- 485584133863. 3
- 485584133864. 4

**Question Number : 101 Question Id : 48558433466 Question Type : MCQ Option Shuffling : No Is Question Mandatory : No Calculator : None Response Time : N.A Think Time : N.A Minimum Instruction Time : 0**

**Correct Marks : 5 Wrong Marks : 1**

**Question Key Details :**

Key	Value
Comprehension	MCQ

ಸೃಜನಶೀಲತೆ (ಕ್ರಿಯೇಟಿವಿಟಿ)ಯ ಪ್ರಕ್ರಿಯೆ ಈ ಅನುಕ್ರಮದಲ್ಲಿ ಆಗುತ್ತದೆ:

- A. ಪ್ರಕಾಶ
- B. ತಯಾರಿ
- C. ಪರಿಶೀಲನೆ
- D. ಕಲ್ಪನೆ ಮೊಳಕೆಯೊಡೆಯುವುದು
- E. ಕಾವು

ಈ ಕೆಳಗಿನ ಆಯ್ಕೆಗಳಿಂದ ಸರಿಯಾದ ಉತ್ತರವನ್ನು ಆರಿಸಿ:

- 1. B, A, D, C, E
- 2. D, B, E, A, C
- 3. B, D, A, E, C
- 4. A, C, D, B, E

**Options :**

- 485584133861. 1
- 485584133862. 2
- 485584133863. 3
- 485584133864. 4

**Question Number : 102 Question Id : 48558433467 Question Type : MCQ Option Shuffling : No Is Question Mandatory : No Calculator : None Response Time : N.A Think Time : N.A Minimum Instruction Time : 0**

**Correct Marks : 5 Wrong Marks : 1**

**Question Key Details :**

Key	Value
Comprehension	MCQ

All ideas may not become a sound business opportunity. Therefore we need to assess the idea and opportunity by following a correct sequence. Rearrange the steps in the correct order.

- A. Level of operation
- B. Product identification
- C. Cost of production
- D. Competition
- E. Application and use

Choose the correct answer from the options given below:

- 1. B, A, D, C, E
- 2. B, E, A, C, D
- 3. C, A, B, E, D
- 4. B, E, A, D, C

**Options :**

- 485584133865. 1
- 485584133866. 2
- 485584133867. 3
- 485584133868. 4

**Question Number : 102 Question Id : 48558433467 Question Type : MCQ Option Shuffling : No Is Question Mandatory : No Calculator : None Response Time : N.A Think Time : N.A Minimum Instruction Time : 0**

**Correct Marks : 5 Wrong Marks : 1**

**Question Key Details :**

Key	Value
Comprehension	MCQ

ಎಲ್ಲಾ ಕಲ್ಪನೆಗಳೂ ಉತ್ತಮ ವ್ಯಾಪಾರ ಅವಕಾಶವಾಗದಿರಬಹುದು. ಆದ್ದರಿಂದ ಸರಿಯಾದ ಅನುಕ್ರಮವನ್ನು ಅನುಸರಿಸುವ ಮೂಲಕ ನಾವು ಕಲ್ಪನೆ ಮತ್ತು ಅವಕಾಶವನ್ನು ನಿರ್ಣಯಿಸಬೇಕಾಗಿದೆ. ಸರಿಯಾದ ಕ್ರಮದಲ್ಲಿ ಹಂತಗಳನ್ನು ಮರುಹೊಂದಿಸಿ.

- A. ಕಾರ್ಯಾಚರಣೆ ಮಟ್ಟ
- B. ಉತ್ಪನ್ನ ಗುರುತಿಸುವಿಕೆ
- C. ಉತ್ಪಾದನಾ ವೆಚ್ಚ
- D. ಸ್ಪರ್ಧೆ
- E. ಅಪ್ಪಿಕೇಶನ್ ಮತ್ತು ಬಳಕೆ

ಈ ಕೆಳಗಿನ ಆಯ್ಕೆಗಳಿಂದ ಸರಿಯಾದ ಉತ್ತರವನ್ನು ಆರಿಸಿ:

- 1. B, A, D, C, E
- 2. B, E, A, C, D
- 3. C, A, B, E, D
- 4. B, E, A, D, C

**Options :**

- 485584133865. 1
- 485584133866. 2
- 485584133867. 3
- 485584133868. 4

**Question Number : 103 Question Id : 48558433468 Question Type : MCQ Option Shuffling : No Is Question Mandatory : No Calculator : None Response Time : N.A Think Time : N.A Minimum Instruction Time : 0**

**Correct Marks : 5 Wrong Marks : 1**

**Question Key Details :**

Key	Value
Comprehension	MCQ

\_\_\_\_\_ are 'Convenient frames of reference for streamlining the process of generation of ideas'.

- 1. Reference fields
- 2. Idea generation
- 3. Idea fields
- 4. Product generation

**Options :**

- 485584133869. 1
- 485584133870. 2
- 485584133871. 3
- 485584133872. 4

**Question Number : 103 Question Id : 48558433468 Question Type : MCQ Option Shuffling : No Is Question Mandatory : No Calculator : None Response Time : N.A Think Time : N.A Minimum Instruction Time : 0**

**Correct Marks : 5 Wrong Marks : 1**

**Question Key Details :**



Key	Value
Comprehension	MCQ

\_\_\_\_\_ "ಕಲ್ಪನೆಗಳ ಉತ್ಪಾದನೆಯ ಪ್ರಕ್ರಿಯೆಯನ್ನು ಸುಗಮಗೊಳಿಸಲು ಅನುಕೂಲಕರ ಉಲ್ಲೇಖ ಚೌಕಟ್ಟು".

1. ಉಲ್ಲೇಖ ಕ್ಷೇತ್ರಗಳು
2. ಕಲ್ಪನೆ ರಚನೆ
3. ಕಲ್ಪನೆಯ ಕ್ಷೇತ್ರಗಳು
4. ಉತ್ಪನ್ನ ರಚನೆ

**Options :**

485584133869. 1  
485584133870. 2  
485584133871. 3  
485584133872. 4

**Question Number : 104 Question Id : 48558433469 Question Type : MCQ Option Shuffling : No Is Question Mandatory : No Calculator : None Response Time : N.A Think Time : N.A Minimum Instruction Time : 0**

**Correct Marks : 5 Wrong Marks : 1**

**Question Key Details :**

Key	Value
Comprehension	MCQ

While on a family outing to a nearby mall by the name of 'RB Mall', Mr. Harji saw that most people coming to the mall forgot their mask, and had to pay a fine ranging from ₹500 to ₹2000/-. So he decided to open a shop for selling mask at the mall entrance. Identify the trend:

1. Read Trend
2. See Trend
3. Watch Trend
4. Talk Trend

**Options :**

485584133873. 1  
485584133874. 2  
485584133875. 3  
485584133876. 4

**Question Number : 104 Question Id : 48558433469 Question Type : MCQ Option Shuffling : No Is Question Mandatory : No Calculator : None Response Time : N.A Think Time : N.A Minimum Instruction Time : 0**

**Correct Marks : 5 Wrong Marks : 1**

**Question Key Details :**

Key	Value
Comprehension	MCQ

ಕುಟುಂಬದ ಜೊತೆ ಹತ್ತಿರದ ವಾಣಿಜ್ಯ ಸಂಕೀರ್ಣ "ಆರ್.ಬಿ. ಮಾಲ್"ಗೆ ಹೋದಾಗ ಶ್ರೀ ಹರ್ಷಿಯವರು ಮಾಲ್‌ಗೆ ಬರುತ್ತಿದ್ದ ತುಂಬ ಜನ ಮಾಸ್ಕ್ ಮರೆತು ರೂ. 500/- ರಿಂದ ರೂ. 2000/- ವರೆಗೂ ದಂಡ ಪಾವತಿಸುತ್ತಿದ್ದರು. ಆದ್ದರಿಂದ ಅವರು ಮಾಲ್‌ನ ಪ್ರವೇಶ ದ್ವಾರದಲ್ಲಿ ಮಾಸ್ಕ್ ಮಾರಾಟ ಮಾಡುವ ಅಂಗಡಿಯನ್ನು ತೆರೆಯಲು ನಿರ್ಧರಿಸಿದರು. ಈ ಪ್ರವೃತ್ತಿಯನ್ನು ಗುರುತಿಸಿ.

1. ಓದುವ ಪ್ರವೃತ್ತಿ
2. ನೋಡುವ ಪ್ರವೃತ್ತಿ
3. ವೀಕ್ಷಿಸುವ ಪ್ರವೃತ್ತಿ
4. ಮಾತನಾಡುವ ಪ್ರವೃತ್ತಿ

**Options :**

485584133873. 1  
 485584133874. 2  
 485584133875. 3  
 485584133876. 4

**Question Number : 105 Question Id : 48558433470 Question Type : MCQ Option Shuffling : No Is Question Mandatory : No Calculator : None Response Time : N.A Think Time : N.A Minimum Instruction Time : 0**

**Correct Marks : 5 Wrong Marks : 1**

**Question Key Details :**

Key	Value
Comprehension	MCQ

'Mansukhbhai Prajapati thought of a non-stick pan made from clay and a clay refrigerator that works without electricity.' Which step of creative process is discussed above?

1. Preparation
2. Idea germination
3. Incubation
4. Illumination

**Options :**

485584133877. 1  
 485584133878. 2  
 485584133879. 3  
 485584133880. 4

**Question Number : 105 Question Id : 48558433470 Question Type : MCQ Option Shuffling : No Is Question Mandatory : No Calculator : None Response Time : N.A Think Time : N.A Minimum Instruction Time : 0**

**Correct Marks : 5 Wrong Marks : 1**

**Question Key Details :**

Key	Value
Comprehension	MCQ

ಮನ್ಯುಖ್ ಭಾಯಿ ಪ್ರಜಾಪತಿಯ ಚಿಂತನೆ ಮಣ್ಣಿನಿಂದ ಮಾಡಿದ ನಾನಾಸ್ವಿಕ್ ಪ್ಯಾನ್ ಮತ್ತು ವಿದ್ಯುತ್ ಇಲ್ಲದೆ ಕೆಲಸ ಮಾಡುವ ರೆಫ್ರಿಜರೇಟರ್. ಸೃಜನಶೀಲ ಪ್ರಕ್ರಿಯೆಯ ಯಾವ ಹಂತವನ್ನು ಮೇಲೆ ಚರ್ಚಿಸಲಾಗಿದೆ?

1. ತಯಾರಿಕೆ
2. ಕಲೆ ಮೊಳಕೆಯೊಡೆಯುವುದು
3. ಕಾವು
4. ಪ್ರಕಾಶ

**Options :**

485584133877. 1  
485584133878. 2  
485584133879. 3  
485584133880. 4

**Question Number : 106 Question Id : 48558433471 Question Type : MCQ Option Shuffling : No Is Question Mandatory : No Calculator : None Response Time : N.A Think Time : N.A Minimum Instruction Time : 0**

**Correct Marks : 5 Wrong Marks : 1**

**Question Key Details :**

Key	Value
Comprehension	MCQ

In which type of opportunity assessment step, you examine an idea through finding out whether the product is present in use and you may think of modifying it for the better use?

1. Level of operation
2. Cost
3. Application and use
4. Competition

**Options :**

485584133881. 1  
485584133882. 2  
485584133883. 3  
485584133884. 4

**Question Number : 106 Question Id : 48558433471 Question Type : MCQ Option Shuffling : No Is Question Mandatory : No Calculator : None Response Time : N.A Think Time : N.A Minimum Instruction Time : 0**

**Correct Marks : 5 Wrong Marks : 1**

**Question Key Details :**

Key	Value
Comprehension	MCQ

ಯಾವ ಅವಕಾಶ ಮೌಲ್ಯಮಾಪನ ಹಂತದಲ್ಲಿ ಉತ್ಪನ್ನವು ಬಳಕೆಯಲ್ಲಿದೆಯೇ ಎಂದು ಕಂಡುಹಿಡಿಯುವ ಮೂಲಕ ನೀವು ಕಲ್ಪನೆಯನ್ನು ಪರಿಶೀಲಿಸುತ್ತೀರಿ ಮತ್ತು ಉತ್ತಮ ಬಳಕೆಗಾಗಿ ಅದನ್ನು ಮಾರ್ಪಡಿಸುವ ಬಗ್ಗೆ ನೀವು ಯೋಚಿಸಬಹುದು.

1. ಸಹಕಾರದ ಮಟ್ಟ
2. ವೆಚ್ಚ
3. ಅಪ್ಲಿಕೇಶನ್ ಮತ್ತು ಬಳಕೆ
4. ಸ್ಪರ್ಧೆ

**Options :**

485584133881. 1  
485584133882. 2  
485584133883. 3  
485584133884. 4

**Question Number : 107 Question Id : 48558433472 Question Type : MCQ Option Shuffling : No Is Question Mandatory : No Calculator : None Response Time : N.A Think Time : N.A Minimum Instruction Time : 0**

**Correct Marks : 5 Wrong Marks : 1**

**Question Key Details :**

Key	Value
Comprehension	MCQ

Family dinner, Speciality Tourism, Career Counselling Centres and Ice-cream Parlours are a part of which idea field?

1. Creative Efforts
2. Trading related Ideas
3. Service Sector Ideas
4. Market Driven Ideas

**Options :**

485584133885. 1  
485584133886. 2  
485584133887. 3  
485584133888. 4

**Question Number : 107 Question Id : 48558433472 Question Type : MCQ Option Shuffling : No Is Question Mandatory : No Calculator : None Response Time : N.A Think Time : N.A Minimum Instruction Time : 0**

**Correct Marks : 5 Wrong Marks : 1**

**Question Key Details :**

Key	Value
Comprehension	MCQ

ಯಾವ ಅವಕಾಶ ಮೌಲ್ಯಮಾಪನ ಹಂತದಲ್ಲಿ, ನೀವು ಉತ್ಪನ್ನವು ಬಳಕೆಯಲ್ಲಿದೆಯೇ ಎಂದು ಕಂಡುಹಿಡಿಯುವ ಮೂಲಕ ನೀವು ಕಲ್ಪನೆಯನ್ನು ಪರಿಶೀಲಿಸುತ್ತೀರಿ ಮತ್ತು ಉತ್ತಮ ಬಳಕೆಗಾಗಿ ಅದನ್ನು ಮಾರ್ಪಡಿಸುವ ಬಗ್ಗೆ ನೀವು ಯೋಚಿಸಬಹುದು?

1. ಸಹಕಾರದ ಮಟ್ಟ
2. ವೆಚ್ಚ
3. ಅಪ್ಲಿಕೇಶನ್ ಮತ್ತು ಬಳಕೆ
4. ಸ್ಪರ್ಧೆ

**Options :**

485584133885. 1  
485584133886. 2  
485584133887. 3  
485584133888. 4

**Question Number : 108 Question Id : 48558433473 Question Type : MCQ Option Shuffling : No Is Question Mandatory : No Calculator : None Response Time : N.A Think Time : N.A Minimum Instruction Time : 0**

**Correct Marks : 5 Wrong Marks : 1**

**Question Key Details :**

Key	Value
Comprehension	MCQ

Avantika did a course in food preservation and decided to set up her own business of food preservation, canning, freezing and pickling. Identify the type of natural resource used by her:

1. Flowers
2. Medicinal Herbs
3. Citrus and other fruits
4. Horticulture

**Options :**

485584133889. 1  
485584133890. 2  
485584133891. 3  
485584133892. 4

**Question Number : 108 Question Id : 48558433473 Question Type : MCQ Option Shuffling : No Is Question Mandatory : No Calculator : None Response Time : N.A Think Time : N.A Minimum Instruction Time : 0**

**Correct Marks : 5 Wrong Marks : 1**

**Question Key Details :**

Key	Value
Comprehension	MCQ

ಅವಂತಿಕಾ, ಆಹಾರ ಸಂರಕ್ಷಣೆಯ ಕೋರ್ಸ್ ಅನ್ನು ಮಾಡಿ, ಆಹಾರ ಸಂರಕ್ಷಣೆ, ಕ್ಯಾನಿಂಗ್, ಫನೀಕರಿಸುವಿಕೆ ಮತ್ತು ಉಪ್ಪಿನಕಾಯಿ ತಯಾರಿಕಾ ವ್ಯಾಪಾರ ಮಾಡಲು ನಿರ್ಧರಿಸಿದ್ದಾಳೆ. ಅವಳು ಬಳಸಿದ ನೈಸರ್ಗಿಕ ಸಂಪನ್ಮೂಲಗಳನ್ನು ಗುರುತಿಸಿ.

1. ಹೂವುಗಳು
2. ಔಷಧೀಯ ಗಿಡಮೂಲಿಕೆಗಳು
3. ಸಿಟ್ರಸ್ ಮತ್ತು ಇತರ ಹಣ್ಣುಗಳು
4. ತೋಟಗಾರಿಕೆ

**Options :**

485584133889. 1  
485584133890. 2  
485584133891. 3  
485584133892. 4

**Question Number : 109 Question Id : 48558433474 Question Type : MCQ Option Shuffling : No Is Question Mandatory : No Calculator : None Response Time : N.A Think Time : N.A Minimum Instruction Time : 0**

**Correct Marks : 5 Wrong Marks : 1**

**Question Key Details :**

Key	Value
Comprehension	MCQ

Identify the term related with concept of "gain generated on an investment relative to the amount of money invested by the shareholder".

1. Returns on Investment
2. Capital Gain
3. Return on Equity
4. Economic Order Quantity

**Options :**

485584133893. 1  
485584133894. 2  
485584133895. 3  
485584133896. 4

**Question Number : 109 Question Id : 48558433474 Question Type : MCQ Option Shuffling : No Is Question Mandatory : No Calculator : None Response Time : N.A Think Time : N.A Minimum Instruction Time : 0**

**Correct Marks : 5 Wrong Marks : 1**

**Question Key Details :**

Key	Value
Comprehension	MCQ

ಈ ಪರಿಕಲ್ಪನೆಗೆ ಸಂಬಂಧಿಸಿದ ಪದವನ್ನು ಗುರುತಿಸಿ: "ಷೇರುದಾರರು ಹೂಡಿಕೆ ಮಾಡಿದ ಮೊತ್ತಕ್ಕೆ ಸಂಬಂಧಿಸಿದಂತೆ ಹೂಡಿಕೆಯ ಮೇಲೆ ಉತ್ಪತ್ತಿಯಾಗುವ ಲಾಭ".

1. ಹೂಡಿಕೆಯ ಮೇಲೆ ಪ್ರತಿಫಲ
2. ಬಂಡವಾಳ ಲಾಭ
3. ಈಕ್ವಿಟಿ ಮೇಲಿನ ಪ್ರ
4. ಆರ್ಥಿಕ ಕ್ರಮದ ಪ್ರಮಾಣ (EOQ)

**Options :**

485584133893. 1  
485584133894. 2  
485584133895. 3  
485584133896. 4

**Question Number : 110 Question Id : 48558433475 Question Type : MCQ Option Shuffling : No Is Question Mandatory : No Calculator : None Response Time : N.A Think Time : N.A Minimum Instruction Time : 0**

**Correct Marks : 5 Wrong Marks : 1**

**Question Key Details :**

Key	Value
Comprehension	MCQ

Shreya has prepared her business plan and is stuck at the marketing plan for her enterprise. Suggest correct steps to her for marketing plan.

- A. Business Situation Analysis
- B. Define marketing Strategy
- C. Conduct SWOT Analysis
- D. Identify the target Market
- E. Establish goals

Choose the correct answer from the options given below:

1. A—B—C—D—E
2. A—D—C—E—B
3. A—C—D—E—B
4. A—D—C—B—E

**Options :**

485584133897. 1  
485584133898. 2  
485584133899. 3  
485584133900. 4

**Question Number : 110 Question Id : 48558433475 Question Type : MCQ Option Shuffling : No Is Question Mandatory : No Calculator : None Response Time : N.A Think Time : N.A Minimum Instruction Time : 0**

**Correct Marks : 5 Wrong Marks : 1**

**Question Key Details :**

Key	Value
-----	-------

ಶ್ರೀಯಾ ಅವಳ ವ್ಯಾಪಾರ ಯೋಜನೆಯನ್ನು ತಯಾರಿಸಿದ್ದಾಳೆ ಮತ್ತು ತನ್ನ ಉದ್ಯಮದ ಮಾರಾಟ ಪ್ರಕ್ರಿಯೆ ಯೋಜನೆಯಲ್ಲಿ ಸಿಲುಕಿಕೊಂಡಳು. ಅವಳ ಮಾರಾಟ ಪ್ರಕ್ರಿಯೆ ಯೋಜನೆಯ ಸರಿಯಾದ ಕ್ರಮ ಸೂಚಿಸಿ.

- ವ್ಯಾಪಾರ ಪರಿಸ್ಥಿತಿ ವಿಶ್ಲೇಷಣೆ
- ಮಾರಾಟ ಪ್ರಕ್ರಿಯೆ ತಂತ್ರವನ್ನು ವ್ಯಾಖ್ಯಾನಿಸಿ
- SWOT ವಿಶ್ಲೇಷಣೆ ನಡೆಸುವುದು
- ಗುರಿ ಮಾರುಕಟ್ಟೆಗಳನ್ನು ಗುರುತಿಸಿ
- ಗುರಿಗಳನ್ನು ಸ್ಥಾಪಿಸಿ

ಈ ಕೆಳಗಿನ ಆಯ್ಕೆಗಳಿಂದ ಸರಿಯಾದ ಉತ್ತರವನ್ನು ಆರಿಸಿ:

- A—B—C—D—E
- A—D—C—E—B
- A—C—D—E—B
- A—D—C—B—E

**Options :**

485584133897. 1
485584133898. 2
485584133899. 3
485584133900. 4

**Question Number : 111 Question Id : 48558433476 Question Type : MCQ Option Shuffling : No Is Question Mandatory : No Calculator : None Response Time : N.A Think Time : N.A Minimum Instruction Time : 0**

**Correct Marks : 5 Wrong Marks : 1**

**Question Key Details :**

Key	Value
Comprehension	MCQ

"Thinking in advance, what is to be done, when it is to be done, how to be done and by whom it should be done," defines

- Problem Solving
- Decision Making
- Planning
- Spotting opportunity

**Options :**

485584133901. 1
485584133902. 2
485584133903. 3
485584133904. 4

**Question Number : 111 Question Id : 48558433476 Question Type : MCQ Option Shuffling : No Is Question Mandatory : No Calculator : None Response Time : N.A Think Time : N.A Minimum Instruction Time : 0**

**Correct Marks : 5 Wrong Marks : 1**



**Question Key Details :**

Key	Value
Comprehension	MCQ

"ಪೂರ್ವ ಚಿಂತನೆ, ಏನು ಮಾಡಬೇಕು, ಯಾವಾಗ ಮಾಡಬೇಕು, ಹೇಗೆ ಮಾಡಬೇಕು ಮತ್ತು ಯಾರು ಮಾಡಬೇಕು" ವ್ಯಾಖ್ಯಾನ.

1. ಸಮಸ್ಯೆ ಪರಿಹರಿಸುವುದು
2. ನಿರ್ಧಾರ ತೆಗೆದುಕೊಳ್ಳುವುದು
3. ಯೋಜಿಸುವುದು
4. ಅವಕಾಶ ಗುರುತಿಸುವುದು

**Options :**

485584133901. 1  
485584133902. 2  
485584133903. 3  
485584133904. 4

**Question Number : 112 Question Id : 48558433477 Question Type : MCQ Option Shuffling : No Is Question Mandatory : No Calculator : None Response Time : N.A Think Time : N.A Minimum Instruction Time : 0**

**Correct Marks : 5 Wrong Marks : 1**

**Question Key Details :**

Key	Value
Comprehension	MCQ

'How do we get there' question in marketing plan doesn't discuss:

1. The specific marketing strategy that will be implemented
2. When it will occur ?
3. Who will be responsible for the monitoring of activities ?
4. What need it satisfies ?

**Options :**

485584133905. 1  
485584133906. 2  
485584133907. 3  
485584133908. 4

**Question Number : 112 Question Id : 48558433477 Question Type : MCQ Option Shuffling : No Is Question Mandatory : No Calculator : None Response Time : N.A Think Time : N.A Minimum Instruction Time : 0**

**Correct Marks : 5 Wrong Marks : 1**

**Question Key Details :**

Key	Value
Comprehension	MCQ

"ಅಲ್ಲಿಗೆ ನಾವು ಹೇಗೆ ಹೋಗುವುದು?" ಮಾರ್ಕೆಟಿಂಗ್ ಯೋಜನೆಯಲ್ಲಿರುವ ಈ ಪ್ರಶ್ನೆಯು ಯಾವುದನ್ನು ಚರ್ಚಿಸುವುದಿಲ್ಲ?

1. ನಿರ್ದಿಷ್ಟ ಮಾರುಕಟ್ಟೆ ತಂತ್ರವನ್ನು ಕಾರ್ಯಗತಗೊಳಿಸಲಾಗುವುದು
2. ಅದು ಯಾವಾಗ ಸಂಭವಿಸುತ್ತದೆ?
3. ಚಟುವಟಿಕೆಗಳ ಮೇಲ್ವಿಚಾರಣೆ ಯಾರು ಜವಾಬ್ದಾರರಾಗಿರುತ್ತಾರೆ?
4. ಯಾವ ಅಗತ್ಯವನ್ನು ಅದು ಪೂರೈಸುತ್ತದೆ

**Options :**

485584133905. 1  
485584133906. 2  
485584133907. 3  
485584133908. 4

**Question Number : 113 Question Id : 48558433478 Question Type : MCQ Option Shuffling : No Is Question Mandatory : No Calculator : None Response Time : N.A Think Time : N.A Minimum Instruction Time : 0**

**Correct Marks : 5 Wrong Marks : 1**

**Question Key Details :**

Key	Value
Comprehension	MCQ

Raghav is the owner of a business. He wants to transfer his ownership to his daughter Poorvi. He can do this without taking permission from anyone if the business is a \_\_\_\_\_ (Fill in the blank.)

1. Partnership firm
2. Public limited company
3. Private limited company
4. Sole Proprietorship

**Options :**

485584133909. 1  
485584133910. 2  
485584133911. 3  
485584133912. 4

**Question Number : 113 Question Id : 48558433478 Question Type : MCQ Option Shuffling : No Is Question Mandatory : No Calculator : None Response Time : N.A Think Time : N.A Minimum Instruction Time : 0**

**Correct Marks : 5 Wrong Marks : 1**

**Question Key Details :**

Key	Value
Comprehension	MCQ

ರಾಫ್‌ವಾ ವ್ಯಾಪಾರದ ಮಾಲೀಕ ಅವನು ಮಾಲೀಕತ್ವವನ್ನು ತನ್ನ ಮಗಳು ಪೂರ್ವಿಗೇ ವರ್ಗಾಯಿಸಲು ಬಯಸುತ್ತಾನೆ. ವ್ಯಾಪಾರವು \_\_\_\_\_ ಆಗಿದ್ದರೆ ಯಾರ ಅಪ್ಪಣೆಯೂ ತೆಗೆದುಕೊಳ್ಳದೆ ಅವನು ಇದನ್ನು ಮಾಡಬಹುದು. (ಬಿಟ್ಟ ಸ್ಥಳ ತುಂಬಿರಿ)

1. ಪಾಲುದಾರಿಕೆ ಸಂಸ್ಥೆ
2. ಸಾರ್ವಜನಿಕ ಲಿಮಿಟೆಡ್ ಕಂಪನಿ
3. ಖಾಸಗಿ ನಿಯಮಿತ ಕಂಪನಿ
4. ಏಕಮಾತ್ರ ಮಾಲೀಕತ್ವ

**Options :**

485584133909. 1  
485584133910. 2  
485584133911. 3  
485584133912. 4

**Question Number : 114 Question Id : 48558433479 Question Type : MCQ Option Shuffling : No Is Question Mandatory : No Calculator : None Response Time : N.A Think Time : N.A Minimum Instruction Time : 0**

**Correct Marks : 5 Wrong Marks : 1**

**Question Key Details :**

Key	Value
Comprehension	MCQ

\_\_\_\_\_ element of business plan helps the entrepreneur to carefully evaluate and decide the legal structure of the organisation. Fill in the above blank with correct option:

1. Organisational plan
2. Marketing plan
3. Financial plan
4. Production plan

**Options :**

485584133913. 1  
485584133914. 2  
485584133915. 3  
485584133916. 4

**Question Number : 114 Question Id : 48558433479 Question Type : MCQ Option Shuffling : No Is Question Mandatory : No Calculator : None Response Time : N.A Think Time : N.A Minimum Instruction Time : 0**

**Correct Marks : 5 Wrong Marks : 1**

**Question Key Details :**

Key	Value
Comprehension	MCQ

ವ್ಯಾಪಾರ ಯೋಜನೆಯ \_\_\_\_\_ ಅಂಶವು ಉದ್ಯಮಿಗಳಿಗೆ ಸಂಸ್ಥೆಯ ಕಾನೂನು ರಚನೆಯನ್ನು ಎಚ್ಚರಿಕೆಯಿಂದ ಮೌಲ್ಯಮಾಪನ ಮಾಡಲು ಮತ್ತು ನಿರ್ಧರಿಸಲು ಸಹಾಯ ಮಾಡುತ್ತದೆ. ಮೇಲಿನ ಖಾಲಿ ಜಾಗವನ್ನು ಸರಿಯಾದ ಆಯ್ಕೆಯೊಂದಿಗೆ ಭರ್ತಿ ಮಾಡಿ.

1. ಸಾಂಸ್ಥಿಕ ಯೋಜನೆ
2. ಮಾರಾಟ ಪ್ರಕ್ರಿಯೆ ಯೋಜನೆ
3. ಹಣಕಾಸಿನ ಯೋಜನೆ
4. ಉತ್ಪಾದನಾ ಯೋಜನೆ

**Options :**

485584133913. 1  
485584133914. 2  
485584133915. 3  
485584133916. 4

**Question Number : 115 Question Id : 48558433480 Question Type : MCQ Option Shuffling : No Is Question Mandatory : No Calculator : None Response Time : N.A Think Time : N.A Minimum Instruction Time : 0**

**Correct Marks : 5 Wrong Marks : 1**

**Question Key Details :**

Key	Value
Comprehension	MCQ

Mannat, a student of entrepreneurship decided to start her venture of manufacturing "Flood rescuing raft". For funding, she contacted one of the angel investors who suggested her to prepare a three minute summary of her business plan. Identify from the following options, the format of business plan suggested to Mannat, which is often used as a teaser to awaken the interest of potential funders, customers etc.

1. A well written presentation for external shareholders
2. An internal operational plan
3. A pitch deck with oral narratives
4. Elevator pitch

**Options :**

485584133917. 1  
485584133918. 2  
485584133919. 3  
485584133920. 4

**Question Number : 115 Question Id : 48558433480 Question Type : MCQ Option Shuffling : No Is Question Mandatory : No Calculator : None Response Time : N.A Think Time : N.A Minimum Instruction Time : 0**

**Correct Marks : 5 Wrong Marks : 1**

**Question Key Details :**

Key	Value
Comprehension	MCQ

ಮನ್ನತ್ ಎಂಬ ಉದ್ಯಮಶೀಲತೆ ವಿದ್ಯಾರ್ಥಿನಿ "ಪ್ರವಾಹದಿಂದ ರಕ್ಷಿಸುವ ತೆಪ್ಪ" ತಯಾರಿಸುವ ಸಾಹಸೋದ್ಯಮ ಶುರು ಮಾಡಲು ನಿರ್ಧರಿಸುತ್ತಾಳೆ. ಧನಸಹಾಯಕ್ಕಾಗಿ ಅವಳು ಒಬ್ಬ ಏಂಜೆಲ್ ಹೂಡಿಕೆದಾರರನ್ನು ಸಂಪರ್ಕಿಸುತ್ತಾಳೆ. ಆ ವ್ಯಕ್ತಿ ಅವಳಿಗೆ ಮೂರು ನಿಮಿಷದ ಚಿಕ್ಕ ವ್ಯಾಪಾರ ಯೋಜನೆ ಸಾರಾಂಶವನ್ನು ತಯಾರಿ ಮಾಡಲು ಹೇಳುತ್ತಾಳೆ. ಯಾವ ರೀತಿಯ ವ್ಯಾಪಾರ ಯೋಜನೆಯ ಸ್ವರೂಪವನ್ನು ಮನ್ನತ್‌ಗೆ ಸೂಚಿಸಲಾಗಿದೆ? ಗುರುತಿಸಿ. ಇದನ್ನು ಸಂಭಾವ್ಯ ನಿಧಿಗಳು, ಗ್ರಾಹಕರ ಆಸಕ್ತಿಗಳನ್ನು ಜಾಗೃತಗೊಳಿಸಲು ಜಾಗೃತಗೊಳಿಸಲು ಯಾವಾಗಲೂ ಟೀಸರ್ ಆಗಿ ಬಳಸುತ್ತಾರೆ.

1. ಬಾಹ್ಯ ಷೇರುದಾರರಿಗೆ ಚೆನ್ನಾಗಿ ಬರೆಯಲಾದ ಪ್ರಸ್ತುತಿ
2. ಆಂತರಿಕ ಕಾರ್ಯಾಚರಣೆಯ ಯೋಜನೆ
3. ಮೌಖಿಕ ನಿರೂಪಣೆಯ ಪಿಚ್ ಡೆಕ್
4. ಎಲಿವೇಟರ್ ಪಿಚ್

**Options :**

485584133917. 1  
 485584133918. 2  
 485584133919. 3  
 485584133920. 4

**Question Number : 116 Question Id : 48558433481 Question Type : MCQ Option Shuffling : No Is Question Mandatory : No Calculator : None Response Time : N.A Think Time : N.A Minimum Instruction Time : 0**

**Correct Marks : 5 Wrong Marks : 1**

**Question Key Details :**

Key	Value
Comprehension	MCQ

Select the option that enlists all the micro environment factors from the following

- A. Competition
- B. Rate of Inflation
- C. Suppliers
- D. Customers
- E. Size of young population of India.

Choose the correct answer from the options given below:

1. B, D, E only
2. A, C, D only
3. C, D, E only
4. B, C, D only

**Options :**

485584133921. 1  
 485584133922. 2  
 485584133923. 3  
 485584133924. 4

Question Number : 116 Question Id : 48558433481 Question Type : MCQ Option Shuffling : No Is Question Mandatory : No Calculator : None Response Time : N.A Think Time : N.A Minimum Instruction Time : 0

Correct Marks : 5 Wrong Marks : 1

Question Key Details :

Key	Value
Comprehension	MCQ

ಕೆಳಗೆ ಸೂಚಿಸಲಾದ ಅಂಕಗಳಿಂದ ಸೂಕ್ತ ಪರಿಸರ ಅಂಶಗಳನ್ನು ಸೇರಿಸಿಕೊಳ್ಳುವ ಸರಿಯಾದ ಅಂಶವನ್ನು ಆಯ್ಕೆ ಮಾಡಿ.

- A. ಸ್ಪರ್ಧೆ
- B. ಹಣದುಬ್ಬರ ದರ
- C. ಪೂರೈಕೆದಾರರು
- D. ಗ್ರಾಹಕರು
- E. ಭಾರತದ ಯುವಕರ ಜನಸಂಖ್ಯೆಯ ಗಾತ್ರ

ಈ ಕೆಳಗಿನ ಆಯ್ಕೆಗಳಿಂದ ಸರಿಯಾದ ಉತ್ತರವನ್ನು ಆರಿಸಿ:

- 1. B, D, E ಮಾತ್ರ
- 2. A, C, D ಮಾತ್ರ
- 3. C, D, E ಮಾತ್ರ
- 4. B, C, D ಮಾತ್ರ

Options :

- 485584133921. 1
- 485584133922. 2
- 485584133923. 3
- 485584133924. 4

Question Number : 117 Question Id : 48558433482 Question Type : MCQ Option Shuffling : No Is Question Mandatory : No Calculator : None Response Time : N.A Think Time : N.A Minimum Instruction Time : 0

Correct Marks : 5 Wrong Marks : 1

Question Key Details :

Key	Value
Comprehension	MCQ

Match List I with List II

LIST I Components of financial plan		LIST II Features	
A.	Proforma investment decision	I.	The amount of cash available
B.	Proforma Financing decision	II.	How much funds are required
C.	Proforma cash flow	III.	Protected net profit
D.	Proforma Income Statement	IV.	Where will funds come from

Choose the correct answer from the options given below:

1. A-I, B-II, C-III, D-IV
2. A-II, B-IV, C-I, D-III
3. A-IV, B-III, C-II, D-I
4. A-III, B-II, C-I, D-IV

**Options :**

485584133925. 1  
485584133926. 2  
485584133927. 3  
485584133928. 4

**Question Number : 117 Question Id : 48558433482 Question Type : MCQ Option Shuffling : No Is Question Mandatory : No Calculator : None Response Time : N.A Think Time : N.A Minimum Instruction Time : 0**

**Correct Marks : 5 Wrong Marks : 1**

**Question Key Details :**

Key	Value
Comprehension	MCQ

ಪಟ್ಟಿ - I ಅನ್ನು ಪಟ್ಟಿ - IIರ ಜೊತೆ ಹೊಂದಿಸಿ.

ಪಟ್ಟಿ - I ಹಣಕಾಸು ಯೋಜನೆಗಳ ಅಂಶಗಳು		ಪಟ್ಟಿ - II ವೈಶಿಷ್ಟ್ಯಗಳು	
A.	ಪ್ರೊಫಾರ್ಮಾ ಹೂಡಿಕೆ ನಿರ್ಧಾರ	I.	ಲಭ್ಯವಿರುವ ನಗದು ಮೊತ್ತ
B.	ಪ್ರೊಫಾರ್ಮಾ ಹಣಕಾಸು ನಿರ್ಧಾರ	II.	ಎಷ್ಟು ಹಣದ ಅಗತ್ಯವಿದೆ
C.	ಪ್ರೊಫಾರ್ಮಾ ನಗದು ಹರಿವು	III.	ಸಂರಕ್ಷಿತ ನಿವ್ವಳ ಲಾಭ
D.	ಪ್ರೊಫಾರ್ಮಾ ಆದಾಯ ಹೇಳಿಕೆ	IV.	ಹಣ ಎಲ್ಲಿಂದ ಬರುತ್ತದೆ

ಈ ಕೆಳಗಿನ ಆಯ್ಕೆಗಳಿಂದ ಸರಿಯಾದ ಉತ್ತರವನ್ನು ಆರಿಸಿ:

1. A-I, B-II, C-III, D-IV
2. A-II, B-IV, C-I, D-III
3. A-IV, B-III, C-II, D-I
4. A-III, B-II, C-I, D-IV

**Options :**

485584133925. 1  
485584133926. 2  
485584133927. 3

**Question Number : 118 Question Id : 48558433483 Question Type : MCQ Option Shuffling : No Is Question Mandatory : No Calculator : None Response Time : N.A Think Time : N.A Minimum Instruction Time : 0**

**Correct Marks : 5 Wrong Marks : 1**

**Question Key Details :**

Key	Value
Comprehension	MCQ

A good advertising catches the eye or ear of the audience. The correct order of remaining stages is:

- A. Interest
- B. Action
- C. Attention
- D. Desire

Choose the correct answer from the options given below:

- 1. A, B, C only
- 2. A, D, B only
- 3. B, D only
- 4. D, A, B only

**Options :**

- 485584133929. 1
- 485584133930. 2
- 485584133931. 3
- 485584133932. 4

**Question Number : 118 Question Id : 48558433483 Question Type : MCQ Option Shuffling : No Is Question Mandatory : No Calculator : None Response Time : N.A Think Time : N.A Minimum Instruction Time : 0**

**Correct Marks : 5 Wrong Marks : 1**

**Question Key Details :**

Key	Value
Comprehension	MCQ



ಒಳ್ಳೆಯ ಜಾಹೀರಾತು ಪ್ರೇಕ್ಷಕರ ಕಣ್ಣು ಮತ್ತು ಕಿವಿಗಳನ್ನು ಸೆಳೆಯುತ್ತದೆ. ಉಳಿದ ಹಂತಗಳ ಕ್ರಮವನ್ನು ಸರಿಪಡಿಸಿ:

- A. ಆಸಕ್ತಿ
- B. ಕ್ರಿಯೆ
- C. ಗಮನ
- D. ಬಯಕೆ

ಈ ಕೆಳಗಿನ ಆಯ್ಕೆಗಳಿಂದ ಸರಿಯಾದ ಉತ್ತರವನ್ನು ಆರಿಸಿ:

- 1. A, B, C ಮಾತ್ರ
- 2. A, D, B ಮಾತ್ರ
- 3. B, D ಮಾತ್ರ
- 4. D, A, B ಮಾತ್ರ

**Options :**

- 485584133929. 1
- 485584133930. 2
- 485584133931. 3
- 485584133932. 4

**Question Number : 119 Question Id : 48558433484 Question Type : MCQ Option Shuffling : No Is Question Mandatory : No Calculator : None Response Time : N.A Think Time : N.A Minimum Instruction Time : 0**

**Correct Marks : 5 Wrong Marks : 1**

**Question Key Details :**

Key	Value
Comprehension	MCQ

'A Patent' :

- 1. Gives the creator of original work exclusive rights
- 2. Grants an inventor the right to exclude others from using or selling an invention
- 3. A recognizable sign, design or expression
- 4. Protects the visual design of objects that are not purely utilitarian

**Options :**

- 485584133933. 1
- 485584133934. 2
- 485584133935. 3
- 485584133936. 4

**Question Number : 119 Question Id : 48558433484 Question Type : MCQ Option Shuffling : No Is Question Mandatory : No Calculator : None Response Time : N.A Think Time : N.A Minimum Instruction Time : 0**

**Correct Marks : 5 Wrong Marks : 1**

**Question Key Details :**

Key	Value
Comprehension	MCQ

"ಪೇಟೆಂಟ್":

1. ಮೂಲ ಸೃಷ್ಟಿಕರ್ತನಿಗೆ ವಿಶೇಷ ಹಕ್ಕುಗಳನ್ನು ನೀಡುತ್ತದೆ
2. ಆವಿಷ್ಕಾರಗಳನ್ನು ಬಳಸುವುದರಿಂದ ಅಥವಾ ಮಾರಾಟ ಮಾಡುವುದರಿಂದ ಇತರರನ್ನು ಹೊರಗಿಡುವ ಹಕ್ಕನ್ನು ಆವಿಷ್ಕಾರಕನಿಗೆ ನೀಡುತ್ತದೆ
3. ಗುರುತಿಸಬಹುದಾದ ಚಿಹ್ನೆ, ವಿನ್ಯಾಸ ಅಥವಾ ಅಭಿವ್ಯಕ್ತಿ
4. ಸಂಪೂರ್ಣವಾಗಿ ಪ್ರಯೋಜನಕಾರಿಯಲ್ಲದ ದೃಶ್ಯ ವಿನ್ಯಾಸವನ್ನು ರಕ್ಷಿಸುತ್ತದೆ

**Options :**

485584133933. 1  
485584133934. 2  
485584133935. 3  
485584133936. 4

**Question Number : 120 Question Id : 48558433485 Question Type : MCQ Option Shuffling : No Is Question Mandatory : No Calculator : None Response Time : N.A Think Time : N.A Minimum Instruction Time : 0**

**Correct Marks : 5 Wrong Marks : 1**

**Question Key Details :**

Key	Value
Comprehension	MCQ

Match List I with List II

LIST I		LIST II	
A.	Product	I.	Method to spread the word about the product or service
B.	Price	II.	Item actually being sold
C.	Place	III.	Value put on a product
D.	Promotion	IV.	Path along which goods move from producers to consumers

Choose the correct answer from the options given below:

1. A-IV, B-II, C-I, D-III
2. A-III, B-II, C-IV, D-I
3. A-II, B-I, C-IV, D-III
4. A-II, B-III, C-IV, D-I

**Options :**

485584133937. 1  
485584133938. 2  
485584133939. 3  
485584133940. 4

**Question Number : 120 Question Id : 48558433485 Question Type : MCQ Option Shuffling : No Is Question Mandatory : No Calculator : None Response Time : N.A Think Time : N.A Minimum Instruction Time : 0**

**Correct Marks : 5 Wrong Marks : 1**

**Question Key Details :**

Key	Value
Comprehension	MCQ

ಪಟ್ಟಿ - I ಅನ್ನು ಪಟ್ಟಿ - IIರ ಜೊತೆ ಹೊಂದಿಸಿ.

ಪಟ್ಟಿ - I		ಪಟ್ಟಿ - II	
A.	ಉತ್ಪನ್ನ	I.	ಉತ್ಪನ್ನ ಅಥವಾ ಸೇವೆಯ ಬಗ್ಗೆ ಪ್ರಚಾರ ಮಾಡುವ ವಿಧಾನ
B.	ಬೆಲೆ	II.	ವಾಸ್ತವವಾಗಿ ಮಾರಾಟ ಮಾಡಿರುವ ವಸ್ತು
C.	ಸ್ಥಳ	III.	ಉತ್ಪನ್ನದ ಮೇಲಿನ ಮೌಲ್ಯ
D.	ಪ್ರವರ್ತನೆ	IV.	ಸರಕುಗಳ ಉತ್ಪಾದಕರಿಂದ ಗ್ರಾಹಕರಿಗೆ ಚಲಿಸುವ ಮಾರ್ಗ

ಈ ಕೆಳಗಿನ ಆಯ್ಕೆಗಳಿಂದ ಸರಿಯಾದ ಉತ್ತರವನ್ನು ಆರಿಸಿ:

1. A-IV, B-II, C-I, D-III
2. A-III, B-II, C-IV, D-I
3. A-II, B-I, C-IV, D-III
4. A-II, B-III, C-IV, D-I

**Options :**

485584133937. 1  
485584133938. 2  
485584133939. 3  
485584133940. 4

**Question Number : 121 Question Id : 48558433486 Question Type : MCQ Option Shuffling : No Is Question Mandatory : No Calculator : None Response Time : N.A Think Time : N.A Minimum Instruction Time : 0**

**Correct Marks : 5 Wrong Marks : 1**

**Question Key Details :**

Key	Value
Comprehension	MCQ

Identify the correct statements

- A. A logo is used as a short path for advertising.
- B. A logo anchors company's brand.
- C. A logo is only used by individuals.
- D. A logo has to be completely graphic.
- E. A logo is also called logotype.

Choose the correct answer from the options given below:

1. A, B only
2. A, B, E only
3. A, E only
4. C, E only

**Options :**

485584133941. 1  
485584133942. 2  
485584133943. 3  
485584133944. 4

**Question Number : 121 Question Id : 48558433486 Question Type : MCQ Option Shuffling : No Is Question Mandatory :  
No Calculator : None Response Time : N.A Think Time : N.A Minimum Instruction Time : 0**

**Correct Marks : 5 Wrong Marks : 1**

**Question Key Details :**

Key	Value
Comprehension	MCQ

ಸರಿಯಾದ ಹೇಳಿಕೆಯನ್ನು ಗುರುತಿಸಿ.

- A. ಲೋಗೋವನ್ನು ಸಣ್ಣ-ಮಾರ್ಗವಾಗಿ ಜಾಹೀರಾತಿಗೆ ಉಪಯೋಗಿಸುತ್ತಾರೆ.  
B. ಲೋಗೋ ಕಂಪನಿಯ ಮುದ್ರೆಗೆ ಆಧಾರ.  
C. ಲೋಗೋವನ್ನು ವ್ಯಕ್ತಿಗಳು ಮಾತ್ರ ಬಳಸುತ್ತಾರೆ.  
D. ಲೋಗೋ ಸಂಪೂರ್ಣವಾಗಿ ಗ್ರಾಫಿಕ್ ಆಗಿರಬೇಕು.  
E. ಲೋಗೋವನ್ನು ಲೋಗೋಟೈಪ್ ಎಂದು ಕೂಡಾ ಕರೆಯುತ್ತಾರೆ.

ಈ ಕೆಳಗಿನ ಆಯ್ಕೆಗಳಿಂದ ಸರಿಯಾದ ಉತ್ತರವನ್ನು ಆರಿಸಿ:

1. A, B ಮಾತ್ರ  
2. A, B, E ಮಾತ್ರ  
3. A, E ಮಾತ್ರ  
4. C, E ಮಾತ್ರ

**Options :**

485584133941. 1  
485584133942. 2  
485584133943. 3  
485584133944. 4

**Question Number : 122 Question Id : 48558433487 Question Type : MCQ Option Shuffling : No Is Question Mandatory :  
No Calculator : None Response Time : N.A Think Time : N.A Minimum Instruction Time : 0**

**Correct Marks : 5 Wrong Marks : 1**

**Question Key Details :**

Key	Value
Comprehension	MCQ

When, with the merger of two companies, the combined value of the entity is more than the sum total of their individual company value, it is called as \_\_\_\_\_;

1. Competency
2. Value addition
3. Synergy
4. Conglomerate

**Options :**

485584133945. 1  
485584133946. 2  
485584133947. 3  
485584133948. 4

**Question Number : 122 Question Id : 48558433487 Question Type : MCQ Option Shuffling : No Is Question Mandatory : No Calculator : None Response Time : N.A Think Time : N.A Minimum Instruction Time : 0**

**Correct Marks : 5 Wrong Marks : 1**

**Question Key Details :**

Key	Value
Comprehension	MCQ

ಯಾವಾಗ ಎರಡು ಕಂಪನಿಗಳ ವಿಲೀನದೊಂದಿಗೆ ಘಟಕದ ಸಂಯೋಜಿತ ಮೌಲ್ಯವು ಅವರ ವೈಯಕ್ತಿಕ ಕಂಪನಿಯ ಒಟ್ಟು ಮೊತ್ತಕ್ಕಿಂತ ಹೆಚ್ಚಾಗಿರುತ್ತದೆಯೋ, ಅದನ್ನು ಈ ರೀತಿ ಕರೆಯುತ್ತಾರೆ \_\_\_\_\_.

1. ಸಾಮರ್ಥ್ಯ
2. ಮೌಲ್ಯವರ್ಧನೆ
3. ಸಿನರ್ಜಿ
4. ಸಂಘಟಿತ

**Options :**

485584133945. 1  
485584133946. 2  
485584133947. 3  
485584133948. 4

**Question Number : 123 Question Id : 48558433488 Question Type : MCQ Option Shuffling : No Is Question Mandatory : No Calculator : None Response Time : N.A Think Time : N.A Minimum Instruction Time : 0**

**Correct Marks : 5 Wrong Marks : 1**

**Question Key Details :**

Key	Value
Comprehension	MCQ

"Rohan took an agency of MRF tyres & opened a shop at Lajpat Nagar market".

Which type of franchising is discussed in the above paragraph?

1. Manufacturing franchise opportunity
2. Product franchise business opportunity
3. Business franchise opportunity venture
4. Business format franchise opportunity

**Options :**

485584133949. 1  
485584133950. 2  
485584133951. 3  
485584133952. 4

**Question Number : 123 Question Id : 48558433488 Question Type : MCQ Option Shuffling : No Is Question Mandatory : No Calculator : None Response Time : N.A Think Time : N.A Minimum Instruction Time : 0**

**Correct Marks : 5 Wrong Marks : 1**

**Question Key Details :**

Key	Value
Comprehension	MCQ

"ರೋಹನ್ ಎಂ.ಆರ್.ಎಫ್. (MRF) ಟೈರ್ಸ್‌ನ ಏಜೆನ್ಸಿ ತೆಗೆದುಕೊಂಡನು ಮತ್ತು ಅಂಗಡಿಯೊಂದನ್ನು ಲಜಪತ್‌ನಗರ ಮಾರುಕಟ್ಟೆಯಲ್ಲಿ ತೆರೆದನು." ಈ ಟಿಪ್ಪಣಿಯಲ್ಲಿ ಯಾವ ವಿಧದ ಫ್ರಾಂಚೈಸಿಂಗ್ ಅನ್ನು ಚರ್ಚಿಸಿದ್ದಾರೆ?

1. ಉತ್ಪಾದನಾ ಫ್ರಾಂಚೈಸಿ ವ್ಯಾಪಾರ ಅವಕಾಶ
2. ಉತ್ಪನ್ನ ಫ್ರಾಂಚೈಸಿ ವ್ಯಾಪಾರ ಅವಕಾಶ
3. ವ್ಯಾಪಾರ ಫ್ರಾಂಚೈಸಿ ಅವಕಾಶ ಸಾಹಸೋದ್ಯಮ
4. ವ್ಯಾಪಾರ ಸ್ವರೂಪ ಫ್ರಾಂಚೈಸಿ ಅವಕಾಶ

**Options :**

485584133949. 1  
485584133950. 2  
485584133951. 3  
485584133952. 4

**Question Number : 124 Question Id : 48558433489 Question Type : MCQ Option Shuffling : No Is Question Mandatory : No Calculator : None Response Time : N.A Think Time : N.A Minimum Instruction Time : 0**

**Correct Marks : 5 Wrong Marks : 1**

**Question Key Details :**

Key	Value
Comprehension	MCQ

Which of the following is NOT the advantage of franchising from the point of view of franchisee?

1. Product Acceptance
2. Knowledge of the market
3. Quick Expansion
4. Management expertise

**Options :**

485584133953. 1  
485584133954. 2  
485584133955. 3  
485584133956. 4

**Question Number : 124 Question Id : 48558433489 Question Type : MCQ Option Shuffling : No Is Question Mandatory : No Calculator : None Response Time : N.A Think Time : N.A Minimum Instruction Time : 0**

**Correct Marks : 5 Wrong Marks : 1**

**Question Key Details :**

Key	Value
Comprehension	MCQ

ಈ ಕೆಳಕಂಡವುಗಳಲ್ಲಿ ಯಾವುದು ಫ್ರಾಂಚೈಸಿಂಗ್‌ನಿಂದ ಫ್ರಾಂಚೈಸಿಗೆ ಅನುಕೂಲವಲ್ಲ.

1. ಉತ್ಪನ್ನ ಸ್ವೀಕಾರ
2. ಮಾರುಕಟ್ಟೆಯ ಜ್ಞಾನ
3. ತ್ವರಿತ ವಿಸ್ತರಣೆ
4. ನಿರ್ವಹಣೆ ಪರಿಣಿತಿ

**Options :**

485584133953. 1  
485584133954. 2  
485584133955. 3  
485584133956. 4

**Question Number : 125 Question Id : 48558433490 Question Type : MCQ Option Shuffling : No Is Question Mandatory : No Calculator : None Response Time : N.A Think Time : N.A Minimum Instruction Time : 0**

**Correct Marks : 5 Wrong Marks : 1**

**Question Key Details :**

Key	Value
Comprehension	MCQ

A merger between the two soft drink manufacturing company in Jaipur is an example of :

1. Conglomerate
2. Market extension mergers
3. Product extension mergers
4. Horizontal merger

**Options :**

485584133957. 1  
485584133958. 2  
485584133959. 3  
485584133960. 4

**Question Number : 125 Question Id : 48558433490 Question Type : MCQ Option Shuffling : No Is Question Mandatory : No Calculator : None Response Time : N.A Think Time : N.A Minimum Instruction Time : 0**

**Correct Marks : 5 Wrong Marks : 1**

**Question Key Details :**

Key	Value
Comprehension	MCQ

ಜೈಪುರದಲ್ಲಿ ಎರಡು ತಂಪು ಪಾನೀಯ ಉತ್ಪಾದನಾ ಸಂಸ್ಥೆಗಳ ವಿಲೀನವಾಗುವುದು ಇದಕ್ಕೆ ಉದಾಹರಣೆ:

1. ಸಂಘಟಿತ
2. ಮಾರುಕಟ್ಟೆ ವಿಸ್ತರಣೆ ವಿಲೀನ
3. ಉತ್ಪನ್ನ ವಿಸ್ತರಣೆ ವಿಲೀನ
4. ಸಮತಲ ವಿಲೀನ

**Options :**

485584133957. 1  
485584133958. 2  
485584133959. 3  
485584133960. 4

**Question Number : 126 Question Id : 48558433491 Question Type : MCQ Option Shuffling : No Is Question Mandatory : No Calculator : None Response Time : N.A Think Time : N.A Minimum Instruction Time : 0**

**Correct Marks : 5 Wrong Marks : 1**

**Question Key Details :**

Key	Value
Comprehension	MCQ



Costs involved with receipt of goods, inspection of goods is known as \_\_\_\_\_.

1. Purchased cost of inventory
2. Ordering cost
3. Holding cost
4. EOQ (Economic Order Quantity)

**Options :**

485584133961. 1  
485584133962. 2  
485584133963. 3  
485584133964. 4

**Question Number : 126 Question Id : 48558433491 Question Type : MCQ Option Shuffling : No Is Question Mandatory : No Calculator : None Response Time : N.A Think Time : N.A Minimum Instruction Time : 0**

**Correct Marks : 5 Wrong Marks : 1**

**Question Key Details :**

Key	Value
Comprehension	MCQ

ಸರಕುಗಳ ಸ್ವೀಕೃತಿಯೊಂದಿಗೆ ಒಳಗೊಂಡಿರುವ ವೆಚ್ಚಗಳು, ಸರಕುಗಳ ತಪಾಸಣೆಯನ್ನು ಹೀಗೆಂದು ಕರೆಯಲಾಗುತ್ತದೆ:

1. ಖರೀದಿಸಿದ ದಾಸ್ತಾನು ವೆಚ್ಚ
2. ಆದೇಶ ವೆಚ್ಚ
3. ಹಿಡುವಳಿ ವೆಚ್ಚ
4. ಆರ್ಥಿಕ ಕ್ರಮದ ಪ್ರಮಾಣ (EOQ)

**Options :**

485584133961. 1  
485584133962. 2  
485584133963. 3  
485584133964. 4

**Question Number : 127 Question Id : 48558433492 Question Type : MCQ Option Shuffling : No Is Question Mandatory : No Calculator : None Response Time : N.A Think Time : N.A Minimum Instruction Time : 0**

**Correct Marks : 5 Wrong Marks : 1**

**Question Key Details :**

Key	Value
Comprehension	MCQ

Money needed to fund the normal day to day operations of a business is:

1. Working Capital
2. Shareholders funds
3. Depreciation
4. Interest

**Options :**

485584133965. 1  
485584133966. 2  
485584133967. 3  
485584133968. 4

**Question Number : 127 Question Id : 48558433492 Question Type : MCQ Option Shuffling : No Is Question Mandatory : No Calculator : None Response Time : N.A Think Time : N.A Minimum Instruction Time : 0**

**Correct Marks : 5 Wrong Marks : 1**

**Question Key Details :**

Key	Value
Comprehension	MCQ

ವ್ಯವಹಾರದ ಸಾಮಾನ್ಯ ದಿನನಿತ್ಯದ ಕಾರ್ಯಾಚರಣೆಗೆ ಹಣದ ಅಗತ್ಯವಿದೆ.

1. ಕಾರ್ಯವಾಹಿ ಬಂಡವಾಳ
2. ಷೇರುದಾರರ ನಿಧಿಗಳು
3. ಸವಕಳಿ
4. ಬಡ್ಡಿ

**Options :**

485584133965. 1  
485584133966. 2  
485584133967. 3  
485584133968. 4

**Question Number : 128 Question Id : 48558433493 Question Type : MCQ Option Shuffling : No Is Question Mandatory : No Calculator : None Response Time : N.A Think Time : N.A Minimum Instruction Time : 0**

**Correct Marks : 5 Wrong Marks : 1**

**Question Key Details :**

Key	Value
Comprehension	MCQ

Net working capital can be calculated using:

- A. Current assets
- B. Non-current assets
- C. Current Liabilities
- D. Non-current Liabilities
- E. Shareholder's funds

Choose the correct answer from the options given below:

- 1. A and D only
- 2. A and B only
- 3. A and C only
- 4. D and E only

**Options :**

- 485584133969. 1
- 485584133970. 2
- 485584133971. 3
- 485584133972. 4

**Question Number : 128 Question Id : 48558433493 Question Type : MCQ Option Shuffling : No Is Question Mandatory : No Calculator : None Response Time : N.A Think Time : N.A Minimum Instruction Time : 0**

**Correct Marks : 5 Wrong Marks : 1**

**Question Key Details :**

Key	Value
Comprehension	MCQ

ನಿವ್ವಳ ಕಾರ್ಯ ಬಂಡವಾಳವನ್ನು ಬಳಸಿಕೊಂಡು ಲೆಕ್ಕ ಹಾಕಬಹುದು:

- A. ಪ್ರಸ್ತುತ ಆಸ್ತಿಗಳು
- B. ಪ್ರಸ್ತುತವಲ್ಲದ ಆಸ್ತಿಗಳು
- C. ಪ್ರಸ್ತುತ ಹೊಣೆಗಾರಿಕೆಗಳು
- D. ಪ್ರಸ್ತುತವಲ್ಲದ ಹೊಣೆಗಾರಿಕೆಗಳು
- E. ಷೇರುದಾರರ ನಿಧಿಗಳು

ಈ ಕೆಳಗಿನ ಆಯ್ಕೆಗಳಿಂದ ಸರಿಯಾದ ಉತ್ತರವನ್ನು ಆರಿಸಿ:

- 1. A ಮತ್ತು D ಮಾತ್ರ
- 2. A ಮತ್ತು B ಮಾತ್ರ
- 3. A ಮತ್ತು C ಮಾತ್ರ
- 4. D ಮತ್ತು E ಮಾತ್ರ

**Options :**

- 485584133969. 1
- 485584133970. 2
- 485584133971. 3
- 485584133972. 4

**Question Number : 129 Question Id : 48558433494 Question Type : MCQ Option Shuffling : No Is Question Mandatory : No Calculator : None Response Time : N.A Think Time : N.A Minimum Instruction Time : 0**  
**Correct Marks : 5 Wrong Marks : 1**

**Question Key Details :**

Key	Value
Comprehension	MCQ

Calculate ROI (Return on Investment); where you spend ₹2,00,000/- to open a restaurant and make a profit of ₹40,000/- in one year

1. 10%
2. 20%
3. 50%
4. 25%

**Options :**

485584133973. 1  
485584133974. 2  
485584133975. 3  
485584133976. 4

**Question Number : 129 Question Id : 48558433494 Question Type : MCQ Option Shuffling : No Is Question Mandatory : No Calculator : None Response Time : N.A Think Time : N.A Minimum Instruction Time : 0**  
**Correct Marks : 5 Wrong Marks : 1**

**Question Key Details :**

Key	Value
Comprehension	MCQ

ROI (ಹೂಡಿಕೆಯ ಮೇಲಿನ ಆದಾಯ); ನೀವು ರೆಸ್ಟೋರೆಂಟು ತೆರೆಯಲು ₹2,00,000/- ಖರ್ಚು ಮಾಡಿ, ಒಂದು ವರ್ಷದಲ್ಲಿ ₹40,000/- ಲಾಭ ಗಳಿಸುತ್ತೀರಿ.

1. 10%
2. 20%
3. 50%
4. 25%

**Options :**

485584133973. 1  
485584133974. 2  
485584133975. 3  
485584133976. 4

**Question Number : 130 Question Id : 48558433495 Question Type : MCQ Option Shuffling : No Is Question Mandatory : No Calculator : None Response Time : N.A Think Time : N.A Minimum Instruction Time : 0**  
**Correct Marks : 5 Wrong Marks : 1**

**Question Key Details :**

Key	Value
Comprehension	MCQ

Effective Inventory Control System aims at

- A. Providing stock as and when the need arises
- B. Procuring stock at minimum possible price
- C. Minimizing cost
- D. Minimizing investment in inventory
- E. Minimizing Control

Choose the correct answer from the options given below:

- 1. A and D only
- 2. B and D only
- 3. A and B only
- 4. D and E only

**Options :**

- 485584133977. 1
- 485584133978. 2
- 485584133979. 3
- 485584133980. 4

**Question Number : 130 Question Id : 48558433495 Question Type : MCQ Option Shuffling : No Is Question Mandatory : No Calculator : None Response Time : N.A Think Time : N.A Minimum Instruction Time : 0**

**Correct Marks : 5 Wrong Marks : 1**

**Question Key Details :**

Key	Value
Comprehension	MCQ

ಪರಿಣಾಮಕಾರಿ ದಾಸ್ತಾನು ನಿಯಂತ್ರಣ ವ್ಯವಸ್ಥೆಯ ಗುರಿಯನ್ನು ಹೊಂದಿದೆ

- A. ಅಗತ್ಯವಿದ್ದಾಗ ಮತ್ತು ಗತ್ಯವಿದ್ದಾಗ ಸ್ಟಾಕ್ ಅನ್ನು ಒದಗಿಸುವುದು
- B. Procuring stock at minimum possible price
- C. Minimizing cost
- D. Minimizing investment in inventory
- E. Minimizing Control

ಈ ಕೆಳಗಿನ ಆಯ್ಕೆಗಳಿಂದ ಸರಿಯಾದ ಉತ್ತರವನ್ನು ಆರಿಸಿ:

- 1. A ಮತ್ತು D ಮಾತ್ರ
- 2. B ಮತ್ತು D ಮಾತ್ರ
- 3. A ಮತ್ತು B ಮಾತ್ರ
- 4. D ಮತ್ತು E ಮಾತ್ರ

**Options :**

- 485584133977. 1
- 485584133978. 2
- 485584133979. 3
- 485584133980. 4

Question Number : 131 Question Id : 48558433496 Question Type : MCQ Option Shuffling : No Is Question Mandatory : No Calculator : None Response Time : N.A Think Time : N.A Minimum Instruction Time : 0  
Correct Marks : 5 Wrong Marks : 1

Question Key Details :

Key	Value
Comprehension	MCQ

A seller sells 30000 units of a product per year, demand is uniform. Purchase cost is Rs. 6/- per product. Holding cost per annum is 20% of purchase cost. Ordering cost is Rs.500/- per order. What would be the Economic Order Quantity?

1. 5000 units
2. 5500 units
3. 5200 units
4. 4800 units

Options :

485584133981. 1  
485584133982. 2  
485584133983. 3  
485584133984. 4

Question Number : 131 Question Id : 48558433496 Question Type : MCQ Option Shuffling : No Is Question Mandatory : No Calculator : None Response Time : N.A Think Time : N.A Minimum Instruction Time : 0

Correct Marks : 5 Wrong Marks : 1

Question Key Details :

Key	Value
Comprehension	MCQ

ಮಾರಾಟಗಾರನು ವರ್ಷಕ್ಕೆ ಉತ್ಪನ್ನದ 30000 ಯೂನಿಟ್‌ಗಳನ್ನು ಮಾರಾಟ ಮಾಡುತ್ತಾನೆ. ಬೇಡಿಕೆಯು ಏಕರೂಪವಾಗಿರುತ್ತದೆ. ಖರೀದಿ ವೆಚ್ಚವು ಪ್ರತಿ ಉತ್ಪನ್ನಕ್ಕೆ ₹6/- ಆಗಿದೆ. ಪ್ರತಿ ವರ್ಷಕ್ಕೆ ಹಿಡುವಳಿ ವೆಚ್ಚವು ಖರೀದಿ ವೆಚ್ಚದ 20% ಆಗಿದೆ. ಆರ್ಡರ್ ಮಾಡುವ ವೆಚ್ಚವು ಪ್ರತಿ ಆರ್ಡರ್‌ಗೆ ₹500/- ಆಗಿದೆ. ಆರ್ಥಿಕ ಕ್ರಮದ ಪ್ರಮಾಣ ಎಷ್ಟು?

1. 5000 units
2. 5500 units
3. 5200 units
4. 4800 units

Options :

485584133981. 1  
485584133982. 2  
485584133983. 3  
485584133984. 4

Question Number : 132 Question Id : 48558433497 Question Type : MCQ Option Shuffling : No Is Question Mandatory : No Calculator : None Response Time : N.A Think Time : N.A Minimum Instruction Time : 0

Correct Marks : 5 Wrong Marks : 1

**Question Key Details :**

Key	Value
Comprehension	MCQ

Sandeep, Mohit, Rajat and Rakesh are businessmen producing different products. It takes Sandeep 4 months, Mohit 3 months, Rajat 7 months and Rakesh 1 month, to purchase inventory and to sell the finished product in the market to get cash. Who will require maximum working capital?

1. Sandeep
2. Mohit
3. Rajat
4. Rakesh

**Options :**

485584133985. 1  
485584133986. 2  
485584133987. 3  
485584133988. 4

**Question Number : 132 Question Id : 48558433497 Question Type : MCQ Option Shuffling : No Is Question Mandatory : No Calculator : None Response Time : N.A Think Time : N.A Minimum Instruction Time : 0**

**Correct Marks : 5 Wrong Marks : 1**

**Question Key Details :**

Key	Value
Comprehension	MCQ

ಸಂದೀಪ್, ಮೋಹಿತ್, ರಜನ್ ಮತ್ತು ರಾಕೇಶ್ ವಿಭಿನ್ನವಾಗಿ ಉತ್ಪಾದಿಸುವ ಉದ್ಯಮಿಗಳು. ಸಂದೀಪ್ 4 ತಿಂಗಳು, ಮೋಹಿತ್ 3 ತಿಂಗಳು, ರಜತ್ 7 ತಿಂಗಳು ಮತ್ತು ರಾಕೇಶ್ 1 ತಿಂಗಳು. ದಾಸ್ತಾನು ಖರೀದಿಸಲು ಮತ್ತು ಸಿದ್ಧಪಡಿಸಿದ ಉತ್ಪನ್ನವನ್ನು ಮಾರುಕಟ್ಟೆಯಲ್ಲಿ ಮಾರಾಟ ಮಾಡಲು ನಗದು ಪಡೆಯಲು ತೆಗೆದುಕೊಳ್ಳುತ್ತದೆ. ಯಾರಿಗೆ ಗರಿಷ್ಠ ಕಾರ್ಯ ಬಂಡವಾಳದ ಅಗತ್ಯವಿರುತ್ತದೆ?

1. ಸಂದೀಪ್
2. ಮೋಹನ್
3. ರಜತ್
4. ರಾಕೇಶ್

**Options :**

485584133985. 1  
485584133986. 2  
485584133987. 3  
485584133988. 4

**Question Number : 133 Question Id : 48558433498 Question Type : MCQ Option Shuffling : No Is Question Mandatory : No Calculator : None Response Time : N.A Think Time : N.A Minimum Instruction Time : 0**

**Correct Marks : 5 Wrong Marks : 1**

**Question Key Details :**

Key	Value
Comprehension	MCQ

The role of transferring financial resources from the surplus units to deficit units is referred to as :

1. Rights Issue
2. Angel Investors
3. Capital Markets
4. Financial intermediation

**Options :**

485584133989. 1  
485584133990. 2  
485584133991. 3  
485584133992. 4

**Question Number : 133 Question Id : 48558433498 Question Type : MCQ Option Shuffling : No Is Question Mandatory : No Calculator : None Response Time : N.A Think Time : N.A Minimum Instruction Time : 0**

**Correct Marks : 5 Wrong Marks : 1**

**Question Key Details :**

Key	Value
Comprehension	MCQ

ಕೊರತೆಯ ಘಟಕಗಳ ಹೆಚ್ಚುವರಿ ಘಟಕಗಳಿಂದ ಹಣಕಾಸಿನ ಸಂಪನ್ಮೂಲಗಳನ್ನು ವರ್ಗಾಯಿಸುವ ಪಾತ್ರವನ್ನು ಹೇಗೆ ಉಲ್ಲೇಖಿಸಲಾಗಿದೆ?

1. ಹಕ್ಕುಗಳ ಸಮಸ್ಯೆ
2. ಏಂಜೆಲ್ ಹೂಡಿಕೆದಾರರು
3. ಬಂಡವಾಳ ಮಾರುಕಟ್ಟೆಗಳು
4. ಆರ್ಥಿಕ ಮಧ್ಯವರ್ತಿ

**Options :**

485584133989. 1  
485584133990. 2  
485584133991. 3  
485584133992. 4

**Question Number : 134 Question Id : 48558433499 Question Type : MCQ Option Shuffling : No Is Question Mandatory : No Calculator : None Response Time : N.A Think Time : N.A Minimum Instruction Time : 0**

**Correct Marks : 5 Wrong Marks : 1**

**Question Key Details :**

Key	Value
Comprehension	MCQ



The 'new issues' may be issued by old companies and are called \_\_\_\_\_.

1. Public issue
2. Rights issue
3. Further issue
4. Initial issue

**Options :**

485584133993. 1  
485584133994. 2  
485584133995. 3  
485584133996. 4

**Question Number : 134 Question Id : 48558433499 Question Type : MCQ Option Shuffling : No Is Question Mandatory : No Calculator : None Response Time : N.A Think Time : N.A Minimum Instruction Time : 0**

**Correct Marks : 5 Wrong Marks : 1**

**Question Key Details :**

Key	Value
Comprehension	MCQ

ಹೊಸ ಸಮಸ್ಯೆಯನ್ನು ಹಳೆಯ ಕಂಪನಿಗಳು ನೀಡಬಹುದು ಮತ್ತು ಇದನ್ನು ಕರೆಯಲಾಗುತ್ತದೆ:

1. ಸಾರ್ವಜನಿಕ ಸಮಸ್ಯೆ
2. ಸರಿಯಾದ ಸಮಸ್ಯೆ
3. ಮುಂದೆ ಸಮಸ್ಯೆ
4. ಆರಂಭಿಕ ಸಮಸ್ಯೆ

**Options :**

485584133993. 1  
485584133994. 2  
485584133995. 3  
485584133996. 4

**Question Number : 135 Question Id : 48558433500 Question Type : MCQ Option Shuffling : No Is Question Mandatory : No Calculator : None Response Time : N.A Think Time : N.A Minimum Instruction Time : 0**

**Correct Marks : 5 Wrong Marks : 1**

**Question Key Details :**

Key	Value
Comprehension	MCQ

Mahima started a venture where she could provide food from various restaurants to passengers travelling by train. She created an app for the same. She was guided all throughout by her friend & mentor Shalini, who was a successful entrepreneur herself. Shalini had a corpus of funds which she decided to transfer to Mahima for her venture. Mahima preferred to give Shalini a return on her investment. Identify the source of financing for Mahima.

1. Venture Capital
2. Angel Investor
3. Loan
4. Charity

**Options :**

485584133997. 1  
 485584133998. 2  
 485584133999. 3  
 485584134000. 4

**Question Number : 135 Question Id : 48558433500 Question Type : MCQ Option Shuffling : No Is Question Mandatory : No Calculator : None Response Time : N.A Think Time : N.A Minimum Instruction Time : 0**

**Correct Marks : 5 Wrong Marks : 1**

**Question Key Details :**

Key	Value
Comprehension	MCQ

ಮಹಿಮಾ ಅವರು ರೈಲಿನಲ್ಲಿ ಪ್ರಯಾಣಿಸುವ ಪ್ರಯಾಣಿಕರಿಗೆ ವಿವಿಧ ರೆಸ್ಟೋರೆಂಟ್‌ಗಳಿಂದ ಆಹಾರವನ್ನು ಒದಗಿಸುವ ಸಾಹಸವನ್ನು ಪ್ರಾರಂಭಿಸಿದರು. ಅದಕ್ಕಾಗಿ ಅವರು ಅಪ್ಲಿಕೇಶನ್ ಅನ್ನು ರಚಿಸಿದರು. ಆಕೆಗೆ ತನ್ನ ಸ್ನೇಹಿತ ಮತ್ತು ಮಾರ್ಗದರ್ಶಕ ಶಾಲಿನಿ ಮೂಲಕ ಮಾರ್ಗದರ್ಶನ ನೀಡಲಾಯಿತು. ಅವರು ಸ್ವತಃ ಯಶಸ್ವಿ ಉದ್ಯಮಿಯಾಗಿದ್ದರು. ತನ್ನ ಸಾಹಸಕ್ಕಾಗಿ ಮಹಿಮಾಗೆ ವರ್ಗಾಯಿಸಲು ನಿರ್ಧರಿಸಿದ ಹಣವನ್ನು ಮಹಿಮಾ ಶಾಲಿನಿಗೆ ತನ್ನ ಹೂಡಿಕೆಯ ಮೇಲೆ ಹಿಂದಿರುಗಿಸಲು ಆದ್ಯತೆ ನೀಡಿದರು. ಮಹಿಮಾಗೆ ಹಣಕಾಸಿನ ಮೂಲವನ್ನು ಗುರುತಿಸಿ.

1. ಸಾಹಸೋದ್ಯಮ ಬಂಡವಾಳ
2. ಏಂಜೆಲ್ ಹೂಡಿಕೆದಾರ
3. ಸಾಲ
4. ದಾನ

**Options :**

485584133997. 1  
 485584133998. 2  
 485584133999. 3  
 485584134000. 4

**Question Number : 136 Question Id : 48558433501 Question Type : MCQ Option Shuffling : No Is Question Mandatory : No Calculator : None Response Time : N.A Think Time : N.A Minimum Instruction Time : 0**

**Correct Marks : 5 Wrong Marks : 1**

**Question Key Details :**

Key	Value
-----	-------

\_\_\_\_\_ is a type of private equity capital provided as seed funding to early stage, high potential, high risk growth up companies/entrepreneurs.

1. Angel investor
2. Venture Capital
3. Working Capital
4. Fixed Capital

**Options :**

485584134001. 1  
485584134002. 2  
485584134003. 3  
485584134004. 4

**Question Number : 136 Question Id : 48558433501 Question Type : MCQ Option Shuffling : No Is Question Mandatory : No Calculator : None Response Time : N.A Think Time : N.A Minimum Instruction Time : 0**

**Correct Marks : 5 Wrong Marks : 1**

**Question Key Details :**

Key	Value
Comprehension	MCQ

\_\_\_\_\_ ಇದು ಆರಂಭಿಕ ಹಂತ, ಹೆಚ್ಚಿನ ಸಾಮರ್ಥ್ಯ, ಹೆಚ್ಚಿನ ಅಪಾಯದ ಬೆಳವಣಿಗೆಯನ್ನು ಕಂಪನಿಗಳು/ಉದ್ಯಮಿಗಳಿಗೆ ಬೀಜ ನಿಧಿಯಾಗಿ ಒದಗಿಸಲಾದ ಖಾಸಗಿ ಇಕ್ವಿಟಿ ಬಂಡವಾಳವಾಗಿದೆ.

1. ಏಂಜೆಲ್ ಹೂಡಿಕೆದಾರ
2. ಸಾಹಸೋದ್ಯಮ ಬಂಡವಾಳ
3. ಕಾರ್ಯವಾಹಿ ಬಂಡವಾಳ
4. ಸ್ಥಿರ ಬಂಡವಾಳ

**Options :**

485584134001. 1  
485584134002. 2  
485584134003. 3  
485584134004. 4

**Question Number : 137 Question Id : 48558433502 Question Type : MCQ Option Shuffling : No Is Question Mandatory : No Calculator : None Response Time : N.A Think Time : N.A Minimum Instruction Time : 0**

**Correct Marks : 5 Wrong Marks : 1**

**Question Key Details :**

Key	Value
Comprehension	MCQ

Match List I with List II

LIST I		LIST II	
Types of Issues		Characteristics	
A.	Public issue	I.	Inexpensive & no brokerage
B.	Rights issue	II.	Stock options to motivate employees
C.	Private placement	III.	Issue of prospects
D.	Offer to employees	IV.	UTI, LIC, GICI, SLFC

Choose the correct answer from the options given below:

1. A-IV, B-III, C-II, D-I
2. A-III, B-I, C-IV, D-II
3. A-II, B-IV, C-I, D-III
4. A-I, B-III, C-II, D-IV

**Options :**

485584134005. 1  
485584134006. 2  
485584134007. 3  
485584134008. 4

**Question Number : 137 Question Id : 48558433502 Question Type : MCQ Option Shuffling : No Is Question Mandatory : No Calculator : None Response Time : N.A Think Time : N.A Minimum Instruction Time : 0**

**Correct Marks : 5 Wrong Marks : 1**

**Question Key Details :**

Key	Value
Comprehension	MCQ

ಪಟ್ಟಿ - I ಅನ್ನು ಪಟ್ಟಿ - IIರ ಜೊತೆ ಹೊಂದಿಸಿ.

ಪಟ್ಟಿ - I (ಸಮಸ್ಯೆ ರೀತಿ)		ಪಟ್ಟಿ - II ಗುಣಲಕ್ಷಣಗಳು	
A.	ಸಾರ್ವಜನಿಕ ಸಮಸ್ಯೆ	I.	ಅಗ್ಗದ ಮತ್ತು ಬ್ರೋಕರೇಜ್ ಇಲ್ಲ
B.	ಹಕ್ಕುಗಳ ಸಮಸ್ಯೆ	II.	ಉದ್ಯೋಗಿಗಳನ್ನು ಪ್ರೇರೇಪಿಸಲು ಸ್ಟಾಕ್ ಆಯ್ಕೆಗಳು
C.	ಖಾಸಗಿ ನಿಯೋಜನೆ	III.	ನಿರೀಕ್ಷೆಗಳ ಸಮಸ್ಯೆ
D.	ಉದ್ಯೋಗಿಗಳಿಗೆ ಕೊಡುಗೆ	IV.	UTI, LIC, GICI, SLFC

ಈ ಕೆಳಗಿನ ಆಯ್ಕೆಗಳಿಂದ ಸರಿಯಾದ ಉತ್ತರವನ್ನು ಆರಿಸಿ:

1. A-IV, B-III, C-II, D-I
2. A-III, B-I, C-IV, D-II
3. A-II, B-IV, C-I, D-III
4. A-I, B-III, C-II, D-IV

**Options :**

485584134005. 1  
485584134006. 2

485584134007. 3

485584134008. 4

**Question Number : 138 Question Id : 48558433503 Question Type : MCQ Option Shuffling : No Is Question Mandatory : No Calculator : None Response Time : N.A Think Time : N.A Minimum Instruction Time : 0**

**Correct Marks : 5 Wrong Marks : 1**

**Question Key Details :**

Key	Value
Comprehension	MCQ

Venture capitalist look for an exit from the business in the time frame of typically 3-7 years. Identify the way venture capitalist (VC) exit within the time frame from the business where they are investing?

1. VC's have a continuous involvement in the business so they do not exit.
2. VC's disinvest the holdings either to the promoters or in the market
3. VC's invest in the early stage and exit in the pre-public stage by disinvesting their holdings to the promoters
4. VC's exit after selling the shares in the market

**Options :**

485584134009. 1

485584134010. 2

485584134011. 3

485584134012. 4

**Question Number : 138 Question Id : 48558433503 Question Type : MCQ Option Shuffling : No Is Question Mandatory : No Calculator : None Response Time : N.A Think Time : N.A Minimum Instruction Time : 0**

**Correct Marks : 5 Wrong Marks : 1**

**Question Key Details :**

Key	Value
Comprehension	MCQ

ವೆಂಚರ್ ಕ್ಯಾಪಿಟಲಿಸ್ಟ್ ಸಾಮಾನ್ಯವಾಗಿ 3-7 ವರ್ಷಗಳ ಕಾಲಾವಧಿಯಲ್ಲಿ ವ್ಯವಹಾರದಿಂದ ನಿರ್ಗಮಿಸಲು ನೋಡುತ್ತಾರೆ. ಅವರು ಹೂಡಿಕೆ ಮಾಡುತ್ತಿರುವ ವ್ಯಾಪಾರದಿಂದ ಸಮಯದ ಚೌಕಟ್ಟಿನೊಳಗೆ ವೆಂಚರ್ ಕ್ಯಾಪಿಟಲಿಸ್ಟ್ (VC) ನಿರ್ಗಮಿಸುವ ವಿಧಾನವನ್ನು ಗುರುತಿಸಿ?

1. VC ಗಳು ವ್ಯವಹಾರದಲ್ಲಿ ನಿರಂತರ ಪಾಲೊಳ್ಳುವಿಕೆಯನ್ನು ಹೊಂದಿರುವುದರಿಂದ ಅವರು ನಿರ್ಗಮಿಸುವುದಿಲ್ಲ.
2. VC ಯು ಹಿಡುವಳಿಗಳನ್ನು ಪ್ರವರ್ತಕರಿಗೆ ಅಥವಾ ಮಾರುಕಟ್ಟೆಯಲ್ಲಿ ಹಿಂತೆಗೆದುಕೊಳ್ಳುತ್ತದೆ.
3. VC ಯು ಆರಂಭಿಕ ಹಂತದಲ್ಲಿ ಹೂಡಿಕೆ ಮಾಡುತ್ತದೆ ಮತ್ತು ಪ್ರವರ್ತಕರಿಗೆ ತಮ್ಮ ಹಿಡುವಳಿಗಳನ್ನು ಹಿಂತೆಗೆದುಕೊಳ್ಳುವ ಮೂಲಕ ಸಾರ್ವಜನಿಕ ಪೂರ್ವ ಹಂತದಲ್ಲಿ ನಿರ್ಗಮಿಸುತ್ತದೆ.
4. ಮಾರುಕಟ್ಟೆಯಲ್ಲಿ ಷೇರುಗಳನ್ನು ಮಾರಾಟ ಮಾಡಿದ ನಂತರ VC ಯ ನಿರ್ಗಮನ.

**Options :**

485584134009. 1

485584134010. 2

485584134011. 3

485584134012. 4

Question Number : 139 Question Id : 48558433504 Question Type : MCQ Option Shuffling : No Is Question Mandatory : No Calculator : None Response Time : N.A Think Time : N.A Minimum Instruction Time : 0  
Correct Marks : 5 Wrong Marks : 1  
Question Key Details :

Key	Value
Comprehension	MCQ

Identify the role played by Amit in the process of Financial Intermediation, if he has money which he does not want to spend

1. Financial Intermediary
2. Surplus Unit
3. Deficit Unit
4. Lender

Options :

485584134013. 1  
485584134014. 2  
485584134015. 3  
485584134016. 4

Question Number : 139 Question Id : 48558433504 Question Type : MCQ Option Shuffling : No Is Question Mandatory : No Calculator : None Response Time : N.A Think Time : N.A Minimum Instruction Time : 0  
Correct Marks : 5 Wrong Marks : 1  
Question Key Details :

Key	Value
Comprehension	MCQ

ಹಣಕಾಸಿನ ಮಧ್ಯವರ್ತಿ ಪ್ರಕ್ರಿಯೆಯಲ್ಲಿ ಅಮಿತ್ ನಿರ್ವಹಿಸಿದ ಪಾತ್ರವನ್ನು ಗುರುತಿಸಿ, ಅವನು ಖರ್ಚು ಮಾಡಲು ಬಯಸಿದ ಹಣವನ್ನು ಹೊಂದಿದ್ದರೆ,

1. ಆರ್ಥಿಕ ಮಧ್ಯವರ್ತಿ
2. ಹೆಚ್ಚುವರಿ ಘಟಕ
3. ಕೊರತೆ ಘಟಕ
4. ಸಾಲದಾತ

Options :

485584134013. 1  
485584134014. 2  
485584134015. 3  
485584134016. 4

Question Number : 140 Question Id : 48558433505 Question Type : MCQ Option Shuffling : No Is Question Mandatory : No Calculator : None Response Time : N.A Think Time : N.A Minimum Instruction Time : 0  
Correct Marks : 5 Wrong Marks : 1  
Question Key Details :

Key	Value
-----	-------

Market facilitating to transfer resources from the savers to the entrepreneurs setting new enterprises is:

1. Primary market
2. Secondary market
3. Money Market
4. Debt Market

**Options :**

485584134017. 1  
485584134018. 2  
485584134019. 3  
485584134020. 4

**Question Number : 140 Question Id : 48558433505 Question Type : MCQ Option Shuffling : No Is Question Mandatory : No Calculator : None Response Time : N.A Think Time : N.A Minimum Instruction Time : 0**

**Correct Marks : 5 Wrong Marks : 1**

**Question Key Details :**

Key	Value
Comprehension	MCQ

ಹೊಸ ಉದ್ಯಮಗಳನ್ನು ಸ್ಥಾಪಿಸುವ ಉದ್ಯಮಿಗಳಿಗೆ ಉಳಿತಾಯದಾರರಿಂದ ಸಂಪನ್ಮೂಲಗಳನ್ನು ವರ್ಗಾಯಿಸಲು ಮಾರುಕಟ್ಟೆ ಅನುಕೂಲ

1. ಪ್ರಾಥಮಿಕ ಮಾರುಕಟ್ಟೆ
2. ದ್ವಿತೀಯ ಮಾರುಕಟ್ಟೆ
3. ಹಣ ಮಾರುಕಟ್ಟೆ
4. ಸಾಲ ಮಾರುಕಟ್ಟೆ

**Options :**

485584134017. 1  
485584134018. 2  
485584134019. 3  
485584134020. 4

**Sub-Section Number :**

2

**Sub-Section Id :**

4855842423

**Question Shuffling Allowed :**

No

**Is Section Default? :**

null

**Question Number : 141 Question Id : 48558433506 Question Type : MCQ Option Shuffling : No Is Question Mandatory : No Calculator : None Response Time : N.A Think Time : N.A Minimum Instruction Time : 0**

**Correct Marks : 5 Wrong Marks : 1**

**Question Key Details :**

Key	Value
Comprehension	Comp1

### Case Study (41-45):

Vibha had created a unique all weather jackets which had solar panels embedded in it. The USP of the jacket was that, harnessing the solar energy it could keep the jacket warm like a heater and cold like an air conditioner depending on the weather. Her market was the youth who came out of the comfort of their homes to stay in hostels. The name of her product was 'TURN COAT' which was beautifully written in comic sans font outside her showroom in FLD Mall. The name had a rising sun next to it making it an attractive composition to look at. Vibha was reading a lot of literature on the promotion strategies that she could use. She had already fixed a public appearance by the superstar Ralia Kapoor at her showroom in 15 days. She opened up Instagram and Twitter accounts in the name of 'TURN COAT'. She got the name of the product and the symbol of the rising sun printed on the parking ticket, that were collected by customers coming to the mall. While deciding on the pricing she was suggested by her mentor to keep the price very high to recover her R & D costs spent on developing the product. She was a little hesitant to do so and decided to price TURN COAT by covering the cost of producing it plus with reasonable profits

The name of Vibha's product 'TURN COAT' written in Comic sans font and the rising sun next to the name is:

1. Brand Mark
2. Logo
3. Brand Name
4. Trade Mark

#### Options :

- 485584134021. 1
- 485584134022. 2
- 485584134023. 3
- 485584134024. 4

**Question Number : 141 Question Id : 48558433506 Question Type : MCQ Option Shuffling : No Is Question Mandatory : No Calculator : None Response Time : N.A Think Time : N.A Minimum Instruction Time : 0**

**Correct Marks : 5 Wrong Marks : 1**

#### Question Key Details :

Key	Value
Comprehension	Comp1

### Case Study

Vibha had created a unique all weather jackets which had solar panels embedded in it. The USP of the jacket was that, harnessing the solar energy it could keep the jacket warm like a heater and cold like an air conditioner depending on the weather. Her market was the youth who came out of the comfort of their homes to stay in hostels. The name of her product was 'TURN COAT' which was beautifully written in comic sans font outside her showroom in FLD Mall. The name had a rising sun next to it making it an attractive composition to look at. Vibha was reading a lot of literature on the promotion strategies that she could use. She had already fixed a public appearance by the superstar Ralia Kapoor at her showroom in 15 days. She opened up Instagram and Twitter accounts in the name of 'TURN COAT'. She got the name of the product and the symbol of the rising sun printed on the parking ticket, that were collected by customers coming to the mall. While deciding on the pricing she was suggested by her mentor to keep the price very high to recover her R & D costs spent on developing the product. She was a little hesitant to do so and decided to price TURN COAT by covering the cost of producing it plus with reasonable profits



ವಿಭಾಳ ಉತ್ಪನ್ನದ ಹೆಸರು 'ಟರ್ನ್‌ಕೋಟ್' ಎಂದು ಕಾಮಿಕ್ ಸಾನ್ಸ್ ಫಾಂಟ್ ಮತ್ತು ಹೆಸರಿನ ಪಕ್ಕದಲ್ಲಿ ಉದಯಿಸುತ್ತಿರುವ ಸೂರ್ಯ. ಇದು:

1. ಮುದ್ರೆಯ ಗುರುತು
2. ಲೋಗೋ
3. ಮುದ್ರೆಯ ಹೆಸರು
4. ವ್ಯಾಪಾರಿ ಗುರುತು

**Options :**

485584134021. 1  
485584134022. 2  
485584134023. 3  
485584134024. 4

**Question Number : 142 Question Id : 48558433507 Question Type : MCQ Option Shuffling : No Is Question Mandatory : No Calculator : None Response Time : N.A Think Time : N.A Minimum Instruction Time : 0**

**Correct Marks : 5 Wrong Marks : 1**

**Question Key Details :**

Key	Value
Comprehension	Comp1

**Case Study (41-45):**

Vibha had created a unique all weather jackets which had solar panels embedded in it. The USP of the jacket was that, harnessing the solar energy it could keep the jacket warm like a heater and cold like an air conditioner depending on the weather. Her market was the youth who came out of the comfort of their homes to stay in hostels. The name of her product was 'TURN COAT' which was beautifully written in comic sans font outside her showroom in FLD Mall. The name had a rising sun next to it making it an attractive composition to look at. Vibha was reading a lot of literature on the promotion strategies that she could use. She had already fixed a public appearance by the superstar Ralia Kapoor at her showroom in 15 days. She opened up Instagram and Twitter accounts in the name of 'TURN COAT'. She got the name of the product and the symbol of the rising sun printed on the parking ticket, that were collected by customers coming to the mall. While deciding on the pricing she was suggested by her mentor to keep the price very high to recover her R & D costs spent on developing the product. She was a little hesitant to do so and decided to price TURN COAT by covering the cost of producing it plus with reasonable profits

The celebrity appearance of Ralia Kapoor at Vibha's showroom can be categorized as a part of:

1. Advertising
2. Public relations
3. Product placement
4. Sales promotion

**Options :**

485584134025. 1  
485584134026. 2  
485584134027. 3

**Question Number : 142 Question Id : 48558433507 Question Type : MCQ Option Shuffling : No Is Question Mandatory : No Calculator : None Response Time : N.A Think Time : N.A Minimum Instruction Time : 0**

**Correct Marks : 5 Wrong Marks : 1**

**Question Key Details :**

Key	Value
Comprehension	Comp1

### Case Study

Vibha had created a unique all weather jackets which had solar panels embedded in it. The USP of the jacket was that, harnessing the solar energy it could keep the jacket warm like a heater and cold like an air conditioner depending on the weather. Her market was the youth who came out of the comfort of their homes to stay in hostels. The name of her product was 'TURN COAT' which was beautifully written in comic sans font outside her showroom in FLD Mall. The name had a rising sun next to it making it an attractive composition to look at. Vibha was reading a lot of literature on the promotion strategies that she could use. She had already fixed a public appearance by the superstar Ralia Kapoor at her showroom in 15 days. She opened up Instagram and Twitter accounts in the name of 'TURN COAT'. She got the name of the product and the symbol of the rising sun printed on the parking ticket, that were collected by customers coming to the mall. While deciding on the pricing she was suggested by her mentor to keep the price very high to recover her R & D costs spent on developing the product. She was a little hesitant to do so and decided to price TURN COAT by covering the cost of producing it plus with reasonable profits

ವಿಭಾಳ ಪ್ರದರ್ಶನ ಕೊಠಡಿಯಲ್ಲಿ, ರಾಲಿಯಾ ಕಪೂರ್ ಅವರ ಸೆಲೆಬ್ರಿಟಿ ಅಪಿಯರೆನ್ಸ್ ಅನ್ನು ಈ ಒಂದು ಭಾಗವಾಗಿ ವರ್ಗೀಕರಿಸಬಹುದು:

1. ಜಾಹೀರಾತು
2. ಸಾರ್ವಜನಿಕ ಸಂಪರ್ಕ
3. ಉತ್ಪನ್ನ ನಿಯೋಜನೆ
4. ಮಾರಾಟ ಪ್ರವರ್ತನೆ

**Options :**

485584134025. 1  
485584134026. 2  
485584134027. 3  
485584134028. 4

**Question Number : 143 Question Id : 48558433508 Question Type : MCQ Option Shuffling : No Is Question Mandatory : No Calculator : None Response Time : N.A Think Time : N.A Minimum Instruction Time : 0**

**Correct Marks : 5 Wrong Marks : 1**

**Question Key Details :**

Key	Value
Comprehension	Comp1

Case Study (41-45):

Vibha had created a unique all weather jackets which had solar panels embedded in it. The USP of the jacket was that, harnessing the solar energy it could keep the jacket warm like a heater and cold like an air conditioner depending on the weather. Her market was the youth who came out of the comfort of their homes to stay in hostels. The name of her product was 'TURN COAT' which was beautifully written in comic sans font outside her showroom in FLD Mall. The name had a rising sun next to it making it an attractive composition to look at. Vibha was reading a lot of literature on the promotion strategies that she could use. She had already fixed a public appearance by the superstar Ralia Kapoor at her showroom in 15 days. She opened up Instagram and Twitter accounts in the name of 'TURN COAT'. She got the name of the product and the symbol of the rising sun printed on the parking ticket, that were collected by customers coming to the mall. While deciding on the pricing she was suggested by her mentor to keep the price very high to recover her R & D costs spent on developing the product. She was a little hesitant to do so and decided to price TURN COAT by covering the cost of producing it plus with reasonable profits

The pricing technique that was suggested to Vibha and the one that she finally used can be identified as-

- A. Variable pricing
- B. Penetration pricing
- C. Skimming pricing
- D. Fixed cost pricing
- E. Cost-plus pricing

Choose the correct answer from the options given below:

- 1. C & E only
- 2. A & B only
- 3. B & D only
- 4. C & D only

**Options :**

- 485584134029. 1
- 485584134030. 2
- 485584134031. 3
- 485584134032. 4

**Question Number : 143 Question Id : 48558433508 Question Type : MCQ Option Shuffling : No Is Question Mandatory : No Calculator : None Response Time : N.A Think Time : N.A Minimum Instruction Time : 0**

**Correct Marks : 5 Wrong Marks : 1**

**Question Key Details :**

Key	Value
Comprehension	Comp1

## Case Study

Vibha had created a unique all weather jackets which had solar panels embedded in it. The USP of the jacket was that, harnessing the solar energy it could keep the jacket warm like a heater and cold like an air conditioner depending on the weather. Her market was the youth who came out of the comfort of their homes to stay in hostels. The name of her product was 'TURN COAT' which was beautifully written in comic sans font outside her showroom in FLD Mall. The name had a rising sun next to it making it an attractive composition to look at. Vibha was reading a lot of literature on the promotion strategies that she could use. She had already fixed a public appearance by the superstar Ralia Kapoor at her showroom in 15 days. She opened up Instagram and Twitter accounts in the name of 'TURN COAT'. She got the name of the product and the symbol of the rising sun printed on the parking ticket, that were collected by customers coming to the mall. While deciding on the pricing she was suggested by her mentor to keep the price very high to recover her R & D costs spent on developing the product. She was a little hesitant to do so and decided to price TURN COAT by covering the cost of producing it plus with reasonable profits

ವಿಭಾಗೆ ಸೂಚಿಸಲಾದ ಬೆಲೆ ತಂತ್ರ ಮತ್ತು ಅವಳು ಂತಿಮವಾಗಿ ಬಳಸಿದುದನ್ನು ಗುರುತಿಸಬಹುದು-

- A. ವೇರಿಯಬಲ್ ಬೆಲೆ ನಿಗದಿ
- B. ಪೆನಿಟ್ರೇಷನಮ್ ಬೆಲೆ ನಿಗದಿ
- C. ಸ್ಕಿಮ್ಮಿಂಗ್ ಬೆಲೆ ನಿಗದಿ
- D. ಸ್ವಿರ ವೆಚ್ಚ ಬೆಲೆ ನಿಗದಿ
- E. ವೆಚ್ಚ-ಜೊತೆಗೆ ಬೆಲೆ ನಿಗದಿ

ಈ ಕೆಳಗಿನ ಆಯ್ಕೆಗಳಿಂದ ಸರಿಯಾದ ಉತ್ತರವನ್ನು ಆರಿಸಿ:

- 1. C ಮತ್ತು E ಮಾತ್ರ
- 2. A ಮತ್ತು B ಮಾತ್ರ
- 3. B ಮತ್ತು D ಮಾತ್ರ
- 4. C ಮತ್ತು D ಮಾತ್ರ

### Options :

- 485584134029. 1
- 485584134030. 2
- 485584134031. 3
- 485584134032. 4

Question Number : 144 Question Id : 48558433509 Question Type : MCQ Option Shuffling : No Is Question Mandatory : No Calculator : None Response Time : N.A Think Time : N.A Minimum Instruction Time : 0

Correct Marks : 5 Wrong Marks : 1

### Question Key Details :

Key	Value
Comprehension	Compl

### Case Study (41-45):

Vibha had created a unique all weather jackets which had solar panels embedded in it. The USP of the jacket was that, harnessing the solar energy it could keep the jacket warm like a heater and cold like an air conditioner depending on the weather. Her market was the youth who came out of the comfort of their homes to stay in hostels. The name of her product was 'TURN COAT' which was beautifully written in comic sans font outside her showroom in FLD Mall. The name had a rising sun next to it making it an attractive composition to look at. Vibha was reading a lot of literature on the promotion strategies that she could use. She had already fixed a public appearance by the superstar Ralia Kapoor at her showroom in 15 days. She opened up Instagram and Twitter accounts in the name of 'TURN COAT'. She got the name of the product and the symbol of the rising sun printed on the parking ticket, that were collected by customers coming to the mall. While deciding on the pricing she was suggested by her mentor to keep the price very high to recover her R & D costs spent on developing the product. She was a little hesitant to do so and decided to price TURN COAT by covering the cost of producing it plus with reasonable profits

The name of the product and the symbol printed on the parking tickets is an example of :

1. Above-the-line approach
2. Public Relations
3. Ambient (Media Mix )
4. Business Promotion (Sales promotion)

#### Options :

- 485584134033. 1
- 485584134034. 2
- 485584134035. 3
- 485584134036. 4

**Question Number : 144 Question Id : 48558433509 Question Type : MCQ Option Shuffling : No Is Question Mandatory : No Calculator : None Response Time : N.A Think Time : N.A Minimum Instruction Time : 0**

**Correct Marks : 5 Wrong Marks : 1**

#### Question Key Details :

Key	Value
Comprehension	Comp1

### Case Study

Vibha had created a unique all weather jackets which had solar panels embedded in it. The USP of the jacket was that, harnessing the solar energy it could keep the jacket warm like a heater and cold like an air conditioner depending on the weather. Her market was the youth who came out of the comfort of their homes to stay in hostels. The name of her product was 'TURN COAT' which was beautifully written in comic sans font outside her showroom in FLD Mall. The name had a rising sun next to it making it an attractive composition to look at. Vibha was reading a lot of literature on the promotion strategies that she could use. She had already fixed a public appearance by the superstar Ralia Kapoor at her showroom in 15 days. She opened up Instagram and Twitter accounts in the name of 'TURN COAT'. She got the name of the product and the symbol of the rising sun printed on the parking ticket, that were collected by customers coming to the mall. While deciding on the pricing she was suggested by her mentor to keep the price very high to recover her R & D costs spent on developing the product. She was a little hesitant to do so and decided to price TURN COAT by covering the cost of producing it plus with reasonable profits

ಉತ್ಪನ್ನದ ಹೆಸರು ಮತ್ತು ಪಾರ್ಕಿಂಗ್ ಟಿಕೆಟ್‌ಗಳಲ್ಲಿ ಮುದ್ರಿಸಲಾದ ಚಿಹ್ನೆಯು ಒಂದು ಉದಾಹರಣೆಯಾಗಿದೆ:

1. ಸಾಲಿನ ಮೇಲಿನ ವಿಧಾನ
2. ಸಾರ್ವಜನಿಕ ಸಂಪರ್ಕ
3. ಸುತ್ತುವರಿದ ಮಾಧ್ಯಮ ಮಿಶ್ರಣ
4. ವ್ಯಾಪಾರ ಪ್ರವರ್ತನೆ

**Options :**

485584134033. 1  
485584134034. 2  
485584134035. 3  
485584134036. 4

**Question Number : 145 Question Id : 48558433510 Question Type : MCQ Option Shuffling : No Is Question Mandatory : No Calculator : None Response Time : N.A Think Time : N.A Minimum Instruction Time : 0**

**Correct Marks : 5 Wrong Marks : 1**

**Question Key Details :**

Key	Value
Comprehension	Compl

Case Study (41-45):

Vibha had created a unique all weather jackets which had solar panels embedded in it. The USP of the jacket was that, harnessing the solar energy it could keep the jacket warm like a heater and cold like an air conditioner depending on the weather. Her market was the youth who came out of the comfort of their homes to stay in hostels. The name of her product was 'TURN COAT' which was beautifully written in comic sans font outside her showroom in FLD Mall. The name had a rising sun next to it making it an attractive composition to look at. Vibha was reading a lot of literature on the promotion strategies that she could use. She had already fixed a public appearance by the superstar Ralia Kapoor at her showroom in 15 days. She opened up Instagram and Twitter accounts in the name of 'TURN COAT'. She got the name of the product and the symbol of the rising sun printed on the parking ticket, that were collected by customers coming to the mall. While deciding on the pricing she was suggested by her mentor to keep the price very high to recover her R & D costs spent on developing the product. She was a little hesitant to do so and decided to price TURN COAT by covering the cost of producing it plus with reasonable profits

Promoting her product on instagram and twitter accounts would fall under:

1. Above the line approach
2. Below the line approach
3. Through the line approach
4. Indirect sales strategy approach

**Options :**

485584134037. 1  
485584134038. 2  
485584134039. 3  
485584134040. 4

Question Number : 145 Question Id : 48558433510 Question Type : MCQ Option Shuffling : No Is Question Mandatory : No Calculator : None Response Time : N.A Think Time : N.A Minimum Instruction Time : 0  
Correct Marks : 5 Wrong Marks : 1

Question Key Details :

Key	Value
Comprehension	Comp1

### Case Study

Vibha had created a unique all weather jackets which had solar panels embedded in it. The USP of the jacket was that, harnessing the solar energy it could keep the jacket warm like a heater and cold like an air conditioner depending on the weather. Her market was the youth who came out of the comfort of their homes to stay in hostels. The name of her product was 'TURN COAT' which was beautifully written in comic sans font outside her showroom in FLD Mall. The name had a rising sun next to it making it an attractive composition to look at. Vibha was reading a lot of literature on the promotion strategies that she could use. She had already fixed a public appearance by the superstar Ralia Kapoor at her showroom in 15 days. She opened up Instagram and Twitter accounts in the name of 'TURN COAT'. She got the name of the product and the symbol of the rising sun printed on the parking ticket, that were collected by customers coming to the mall. While deciding on the pricing she was suggested by her mentor to keep the price very high to recover her R & D costs spent on developing the product. She was a little hesitant to do so and decided to price TURN COAT by covering the cost of producing it plus with reasonable profits

ಇನ್‌ಸ್ಟ್ರಾಗ್ರಾಮ್ ಮತ್ತು ಟ್ವಿಟರ್ ಖಾತೆಗಳಲ್ಲಿ ತನ್ನ ಉತ್ಪನ್ನ ಮತ್ತು ಪ್ರಚಾರ ಮಾಡುವುದು ಯಾವ ಅಡಿಯಲ್ಲಿ ಬರುತ್ತದೆ?

1. ಸಾಲಿನ ಮೇಲಿನ ನಿರ್ಧಾರ
2. ರೇಖೆಯ ಕೆಳಗಿನ ವಿಧಾನ
3. ಸಾಲಿನ ಮೂಲಕ ವಿಧಾನ
4. ಪರೋಕ್ಷ ಮಾರಾಟ ತಂತ್ರ ವಿಧಾನ

### Options :

485584134037. 1  
485584134038. 2  
485584134039. 3  
485584134040. 4

Sub-Section Number : 3  
Sub-Section Id : 4855842424  
Question Shuffling Allowed : No  
Is Section Default? : null

Question Number : 146 Question Id : 48558433511 Question Type : MCQ Option Shuffling : No Is Question Mandatory : No Calculator : None Response Time : N.A Think Time : N.A Minimum Instruction Time : 0  
Correct Marks : 5 Wrong Marks : 1

Question Key Details :

Key	Value
Comprehension	Comp2

Mergers: Read the case and answer the questions (46-50)

Gaurav owned an event management company called 'Lotus Ltd.' in Mumbai. He used to organise weddings, meetings, conferences, etc. These events were full of activities, music, food and entertainment. He used to outsource decoration material, food as well as entertainment from different vendors.

Ms. Geetika was an owner of catering and decoration company called Miles Ltd. in Mumbai. She used to cater the food and decoration needs of various customers such as corporate as well as family functions.

Gaurav & Geetika were performing well in their respective businesses until covid-19 lockdown was introduced. Due to lack of demand for food, decoration and events, both the companies started facing losses. As the lockdown was lifted, nearly after a year, both Gaurav and Geetika were facing problems in managing their increasing operational costs with lesser number of customers. As they were planning to look for better business opportunity, they got to meet each other at an 'exponential' organised by trades of Mumbai at BKC ground.

In this 'exponential', there were different traders sharing their business ideas with each other. Hence, it was here that Gaurav and Geetika decided to restart their business by merging their operations with a new company name. 'G<sup>2</sup> Lotus Miles Ltd'. They both shared their contacts of vendors and customers with each other and started getting order for events, food, decoration, entertainment, etc. Their business started blooming as their costs were lesser and more customers with demand of services given by Gaurav and Geetika.

Now its been two years that both of them have grown their business into other cities of Maharashtra like, Pune, Ahmednagar and Nagpur under the company name of 'G<sup>2</sup> Lotus Miles Ltd'. The company is growing with increased annual sales of 30%.

Which of the following is applicable in case of "G<sup>2</sup> Lotus Miles ltd"?

1. Product extension merger
2. Market extension merger
3. Vertical merger
4. Horizontal merger

**Options :**

- 485584134041. 1
- 485584134042. 2
- 485584134043. 3
- 485584134044. 4

**Question Number : 146 Question Id : 48558433511 Question Type : MCQ Option Shuffling : No Is Question Mandatory : No Calculator : None Response Time : N.A Think Time : N.A Minimum Instruction Time : 0**

**Correct Marks : 5 Wrong Marks : 1**

**Question Key Details :**

Key	Value
Comprehension	Comp2



ಪ್ರಕರಣವನ್ನು ಓದಿ ಮತ್ತು ಪ್ರಶ್ನೆಗಳಿಗೆ ಉತ್ತರಿಸಿ

ಗೌರವ ಮುಂಬೈನಲ್ಲಿ "ಲೋಟಸ್ ಲಿಮಿಟೆಡ್" ಎಂಬ ಈವೆಂಟ್ ಮ್ಯಾನೇಜ್‌ಮೆಂಟ್ ಕಂಪನಿಯನ್ನು ಹೊಂದಿದ್ದರು. ಅವರು ಮದುವೆಗಳು, ಸಭೆಗಳು, ಸಮ್ಮೇಳನಗಳು ಇತ್ಯಾದಿಗಳನ್ನು ಆಯೋಜಿಸುತ್ತಿದ್ದರು. ಈ ಘಟನೆಗಳು, ಚಟುವಟಿಕೆಗಳು ಸಂಗೀತ, ಆಹಾರ ಮತ್ತು ಮನೋರಂಜನೆಯನ್ನು ಒಳಗೊಂಡಿವೆ. ಅವರು ಡಿಫರೆನ್ಸ್ ಮಾರಾಟಗಾರರಿಂದ ಅಲಂಕಾರ ಸಾಮಗ್ರಿ, ಆಹಾರ ಮತ್ತು ಮನರಂಜನೆಯನ್ನು ಹೊರಗುತ್ತಿಗೆಗೆ ಬಳಸುತ್ತಿದ್ದರು.

Ms. ಗೀತಿಕಾ ಮುಂಬೈನಲ್ಲಿ ಮೈಲ್ಸ್ ಲಿಮಿಟೆಡ್ ಎಂಬ ಕ್ಯಾಟರಿಂಗ್ ಮತ್ತು ಡೆಕೋರೇಷನ್ ಕಂಪನಿಯ ಮಾಲೀಕರಾಗಿದ್ದರು. ವಿವಿಧ ಗ್ರಾಹಕರ ಆಹಾರ ಮತ್ತು ಅಲಂಕಾರದ ಅಗತ್ಯಗಳನ್ನು ಪೂರೈಸುತ್ತಿದ್ದರು. ಕೋವಿಡ್-19 ಲಾಕ್‌ಡೌನ್ ಅನ್ನು ಪರಿಚಯಿಸುವವರೆಗೂ ಗೌರವ ಮತ್ತು ಗೀತಿಕಾ ತಮ್ಮ ಪುನರಾವರ್ತಿತ ವ್ಯವಹಾರದಲ್ಲಿ ಉತ್ತಮವಾಗಿ ಕಾರ್ಯನಿರ್ವಹಿಸುತ್ತಿದ್ದರು. ಆಹಾರ, ಅಲಂಕಾರ, ಮತ್ತು ಕಾರ್ಯಕ್ರಮಗಳಿಗೆ ಬೇಡಿಕೆಯ ಕೊರತೆಯಿಂದಾಗಿ ಎರಡೂ ಘಟಕಗಳು ನಷ್ಟವನ್ನು ಎದುರಿಸಲಾರಂಭಿಸಿದವು. ಲಾಕ್‌ಡೌನ್ ಹಿಂತೆಗೆದುಕೊಂಡಂತೆ, ಸುಮಾರು ಒಂದು ವರ್ಷದ ನಂತರ ಗೌರವ ಮತ್ತು ಗೀತಿಕಾ ಇಬ್ಬರೂ ಕಡಿಮೆ ಸಂಖ್ಯೆಯ ಗ್ರಾಹಕರೊಂದಿಗೆ ತಮ್ಮ ಹೆಚ್ಚುತ್ತಿರುವ ಕಾರ್ಯಾಚರಣೆ ವೆಚ್ಚವನ್ನು ಹೆಚ್ಚಿಸುವಲ್ಲಿ ಸಮಸ್ಯೆಯನ್ನು ಎದುರಿಸುತ್ತಿದ್ದಾರೆ. ಅವರು ಉತ್ತಮ ವ್ಯಾಪಾರ ಅವಕಾಶವನ್ನು ಹುಡುಕಲು ಯೋಚಿಸುತ್ತಿರುವಾಗ ಅವರು ಬಿಕೆಸಿ ಮೈದಾನದಲ್ಲಿ ಮುಂಬೈನ ವ್ಯಾಪಾರದಿಂದ ಆಯೋಜಿಸಲಾದ 'ಎಕ್ಸ್‌ಪೋನೆಂಶಿಯಲ್' ನಲ್ಲಿ ಪರಸ್ಪರ ಭೇಟಿಯಾದರು.

ಈ ಎಕ್ಸ್‌ಪೋನೆಂಶಿಯಲ್‌ನಲ್ಲಿ ವಿಭಿನ್ನ ನೆಟ್ ಟ್ರೇಡ್‌ಗಳು ತಮ್ಮ ವ್ಯಾಪಾರದ ಐಡಿಯಾಗಳನ್ನು ಪರಸ್ಪರ ಹಂಚಿಕೊಳ್ಳುತ್ತಿದ್ದರು. ಆದ್ದರಿಂದ "G<sup>2</sup> Lotus Miles Ltd" ಎಂಬ ಹೊಸ ಕಂಪನಿಯ ಹೆಸರಿನೊಂದಿಗೆ ತಮ್ಮ ಕಾರ್ಯಾಚರಣೆಗಳನ್ನು ವಿಲೀನಗೊಳಿಸುವ ಮೂಲಕ ಗೌರವ ಮತ್ತು ಗೀತಿಕಾ ತಮ್ಮ ವ್ಯವಹಾರವನ್ನು ಮರುಪ್ರಾರಂಭಿಸಲು ನಿರ್ಧರಿಸಿದ್ದಾರೆ. ಅವರಿಬ್ಬರೂ ತಮ್ಮ ಮಾರಾಟಗಾರ ಮತ್ತು ಗ್ರಾಹಕರ ಸಂಪರ್ಕವನ್ನು ಪರಸ್ಪರ ಹಂಚಿಕೊಂಡರು ಮತ್ತು ಈವೆಂಟ್‌ಗಳಿಗೆ ಆಹಾರ, ಅಲಂಕಾರ ಮತ್ತು ಮನರಂಜನೆ ಇತ್ಯಾದಿಗಳಿಗೆ ಆರ್ಡರ್ ಪಡೆಯಲು ಪ್ರಾರಂಭಿಸಿದರು. ಅವರ ವ್ಯಾಪಾರವು ಬ್ಲೂಮಿಂಗ್ ಅನ್ನು ಪ್ರಾರಂಭಿಸಿತು. ಏಕೆಂದರೆ, ಅವರ ವೆಚ್ಚಗಳು ಕಡಿಮೆ ಮತ್ತು ಹೆಚ್ಚಿನ ಗ್ರಾಹಕರು ನೀಡಿದ ಗೌರವ ಮತ್ತು ಗೀತಿಕಾ ಸೇರಿಯ ಬೇಡಿಕೆಯೊಂದಿಗೆ ಈಗ ಅವರಿಬ್ಬರೂ ಮಹಾರಾಷ್ಟ್ರದ ಇತರ ನಗರಗಳಾದ ಪುಣೆ, ಅಹ್ಮದ್‌ನಗರ ಮತ್ತು ನಾಗ್ಪುರಗಳಲ್ಲಿ "G<sup>2</sup> Lotus Miles Ltd" ಎಂಬ ಕಂಪನಿಯ ಹೆಸರಿನಲ್ಲಿ ವ್ಯಾಪಾರವನ್ನು ಬೆಳೆಸಿ, ಎರಡು ವರ್ಷಗಳಾಗಿವೆ. ಕಂಪನಿಯು 30% ರಷ್ಟು ಹೆಚ್ಚಿನ ದರದ ಮಾರಾಟದೊಂದಿಗೆ ಬೆಳೆಯುತ್ತಿದೆ.

ಕೆಳಗಿನವುಗಳಲ್ಲಿ ಯಾವುದು "G<sup>2</sup> Lotus Miles Ltd"ಗೆ ಅನ್ವಯಿಸುತ್ತದೆ?

1. ಉತ್ಪನ್ನ ವಿಸ್ತರಣೆ ವಿಲೀನ
2. ಮಾರುಕಟ್ಟೆ ವಿಸ್ತರಣೆ ವಿಲೀನ
3. ಲಂಬವಾದ ವಿಲೀನ
4. ಸಮತಲ ವಿಲೀನ

**Options :**

485584134041. 1
485584134042. 2
485584134043. 3
485584134044. 4

**Question Number : 147 Question Id : 48558433512 Question Type : MCQ Option Shuffling : No Is Question Mandatory : No Calculator : None Response Time : N.A Think Time : N.A Minimum Instruction Time : 0**

**Correct Marks : 5 Wrong Marks : 1**

**Question Key Details :**

Key	Value
Comprehension	Comp2

Mergers: Read the case and answer the questions (46-50)

Gaurav owned an event management company called 'Lotus Ltd.' in Mumbai. He used to organise weddings, meetings, conferences, etc. These events were full of activities, music, food and entertainment. He used to outsource decoration material, food as well as entertainment from different vendors.

Ms. Geetika was an owner of catering and decoration company called Miles Ltd. in Mumbai. She used to cater the food and decoration needs of various customers such as corporate as well as family functions.

Gaurav & Geetika were performing well in their respective businesses until covid-19 lockdown was introduced. Due to lack of demand for food, decoration and events, both the companies started facing losses. As the lockdown was lifted, nearly after a year, both Gaurav and Geetika were facing problems in managing their increasing operational costs with lesser number of customers. As they were planning to look for better business opportunity, they got to meet each other at an 'exponential' organised by trades of Mumbai at BKC ground.

In this 'exponential', there were different traders sharing their business ideas with each other. Hence, it was here that Gaurav and Geetika decided to restart their business by merging their operations with a new company name. 'G<sup>2</sup> Lotus Miles Ltd'. They both shared their contacts of vendors and customers with each other and started getting order for events, food, decoration, entertainment, etc. Their business started blooming as their costs were lesser and more customers with demand of services given by Gaurav and Geetika.

Now its been two years that both of them have grown their business into other cities of Maharashtra like, Pune, Ahmednagar and Nagpur under the company name of 'G<sup>2</sup> Lotus Miles Ltd'. The company is growing with increased annual sales of 30%.

The new company so formed "G<sup>2</sup> Lotus Miles Ltd" is an example of:

1. Acquisition
2. Franchising
3. Amalgamation
4. Absorption

**Options :**

- 485584134045. 1
- 485584134046. 2
- 485584134047. 3
- 485584134048. 4

**Question Number : 147 Question Id : 48558433512 Question Type : MCQ Option Shuffling : No Is Question Mandatory : No Calculator : None Response Time : N.A Think Time : N.A Minimum Instruction Time : 0**

**Correct Marks : 5 Wrong Marks : 1**

**Question Key Details :**

Key	Value
Comprehension	Comp2

ಪ್ರಕರಣವನ್ನು ಓದಿ ಮತ್ತು ಪ್ರಶ್ನೆಗಳಿಗೆ ಉತ್ತರಿಸಿ

ಗೌರವ್ ಮುಂಬೈನಲ್ಲಿ "ಲೋಟಸ್ ಲಿಮಿಟೆಡ್" ಎಂಬ ಈವೆಂಟ್ ಮ್ಯಾನೇಜ್‌ಮೆಂಟ್ ಕಂಪನಿಯನ್ನು ಹೊಂದಿದ್ದರು. ಅವರು ಮದುವೆಗಳು, ಸಭೆಗಳು, ಸಮ್ಮೇಳನಗಳು ಇತ್ಯಾದಿಗಳನ್ನು ಆಯೋಜಿಸುತ್ತಿದ್ದರು. ಈ ಘಟನೆಗಳು, ಚಟುವಟಿಕೆಗಳು ಸಂಗೀತ, ಆಹಾರ ಮತ್ತು ಮನೋರಂಜನೆಯನ್ನು ಒಳಗೊಂಡಿವೆ. ಅವರು ಡಿಫರೆನ್ಸ್ ಮಾರಾಟಗಾರರಿಂದ ಅಲಂಕಾರ ಸಾಮಗ್ರಿ, ಆಹಾರ ಮತ್ತು ಮನರಂಜನೆಯನ್ನು ಹೊರಗುತ್ತಿಗೆಗೆ ಬಳಸುತ್ತಿದ್ದರು.

Ms. ಗೀತಿಕಾ ಮುಂಬೈನಲ್ಲಿ ಮೈಲ್ಸ್ ಲಿಮಿಟೆಡ್ ಎಂಬ ಕ್ಯಾಟರಿಂಗ್ ಮತ್ತು ಡೆಕೋರೇಷನ್ ಕಂಪನಿಯ ಮಾಲೀಕರಾಗಿದ್ದರು. ವಿವಿಧ ಗ್ರಾಹಕರ ಆಹಾರ ಮತ್ತು ಅಲಂಕಾರದ ಅಗತ್ಯಗಳನ್ನು ಪೂರೈಸುತ್ತಿದ್ದರು. ಕೋವಿಡ್-19 ಲಾಕ್‌ಡೌನ್ ಅನ್ನು ಪರಿಚಯಿಸುವವರೆಗೂ ಗೌರವ್ ಮತ್ತು ಗೀತಿಕಾ ತಮ್ಮ ಪುನರಾವರ್ತಿತ ವ್ಯವಹಾರದಲ್ಲಿ ಉತ್ತಮವಾಗಿ ಕಾರ್ಯನಿರ್ವಹಿಸುತ್ತಿದ್ದರು. ಆಹಾರ, ಅಲಂಕಾರ, ಮತ್ತು ಕಾರ್ಯಕ್ರಮಗಳಿಗೆ ಬೇಡಿಕೆಯ ಕೊರತೆಯಿಂದಾಗಿ ಎರಡೂ ಘಟಕಗಳು ನಷ್ಟವನ್ನು ಎದುರಿಸಲಾರಂಭಿಸಿದವು. ಲಾಕ್‌ಡೌನ್ ಹಿಂತೆಗೆದುಕೊಂಡಂತೆ, ಸುಮಾರು ಒಂದು ವರ್ಷದ ನಂತರ ಗೌರವ್ ಮತ್ತು ಗೀತಿಕಾ ಇಬ್ಬರೂ ಕಡಿಮೆ ಸಂಖ್ಯೆಯ ಗ್ರಾಹಕರೊಂದಿಗೆ ತಮ್ಮ ಹೆಚ್ಚುತ್ತಿರುವ ಕಾರ್ಯಾಚರಣೆ ವೆಚ್ಚವನ್ನು ಹೆಚ್ಚಿಸುವಲ್ಲಿ ಸಮಸ್ಯೆಯನ್ನು ಎದುರಿಸುತ್ತಿದ್ದಾರೆ. ಅವರು ಉತ್ತಮ ವ್ಯಾಪಾರ ಅವಕಾಶವನ್ನು ಹುಡುಕಲು ಯೋಚಿಸುತ್ತಿರುವಾಗ ಅವರು ಬಿಕೆಸಿ ಮೈದಾನದಲ್ಲಿ ಮುಂಬೈನ ವ್ಯಾಪಾರದಿಂದ ಆಯೋಜಿಸಲಾದ 'ಎಕ್ಸ್‌ಪೋನೆಂಶಿಯಲ್' ನಲ್ಲಿ ಪರಸ್ಪರ ಭೇಟಿಯಾದರು.

ಈ ಎಕ್ಸ್‌ಪೋನೆಂಶಿಯಲ್‌ನಲ್ಲಿ ವಿಭಿನ್ನ ನೆಟ್ ಟ್ರೇಡ್‌ಗಳು ತಮ್ಮ ವ್ಯಾಪಾರದ ಐಡಿಯಾಗಳನ್ನು ಪರಸ್ಪರ ಹಂಚಿಕೊಳ್ಳುತ್ತಿದ್ದರು. ಆದ್ದರಿಂದ "G<sup>2</sup> Lotus Miles Ltd" ಎಂಬ ಹೊಸ ಕಂಪನಿಯ ಹೆಸರಿನೊಂದಿಗೆ ತಮ್ಮ ಕಾರ್ಯಾಚರಣೆಗಳನ್ನು ವಿಲೀನಗೊಳಿಸುವ ಮೂಲಕ ಗೌರವ್ ಮತ್ತು ಗೀತಿಕಾ ತಮ್ಮ ವ್ಯವಹಾರವನ್ನು ಮರುಪ್ರಾರಂಭಿಸಲು ನಿರ್ಧರಿಸಿದ್ದಾರೆ. ಅವರಿಬ್ಬರೂ ತಮ್ಮ ಮಾರಾಟಗಾರ ಮತ್ತು ಗ್ರಾಹಕರ ಸಂಪರ್ಕವನ್ನು ಪರಸ್ಪರ ಹಂಚಿಕೊಂಡರು ಮತ್ತು ಈವೆಂಟ್‌ಗಳಿಗೆ ಆಹಾರ, ಅಲಂಕಾರ ಮತ್ತು ಮನರಂಜನೆ ಇತ್ಯಾದಿಗಳಿಗೆ ಆರ್ಡರ್ ಪಡೆಯಲು ಪ್ರಾರಂಭಿಸಿದರು. ಅವರ ವ್ಯಾಪಾರವು ಬ್ಲಿಪ್‌ಮಿಂಗ್ ಅನ್ನು ಪ್ರಾರಂಭಿಸಿತು. ಏಕೆಂದರೆ, ಅವರ ವೆಚ್ಚಗಳು ಕಡಿಮೆ ಮತ್ತು ಹೆಚ್ಚಿನ ಗ್ರಾಹಕರು ನೀಡಿದ ಗೌರವ ಮತ್ತು ಗೀತಿಕಾ ಸೇರಿಯ ಬೇಡಿಕೆಯೊಂದಿಗೆ ಈಗ ಅವರಿಬ್ಬರೂ ಮಹಾರಾಷ್ಟ್ರದ ಇತರ ನಗರಗಳಾದ ಪುಣೆ, ಅಹ್ಮದ್‌ನಗರ ಮತ್ತು ನಾಗ್ಪುರಗಳಲ್ಲಿ "G<sup>2</sup> Lotus Miles Ltd" ಎಂಬ ಕಂಪನಿಯ ಹೆಸರಿನಲ್ಲಿ ವ್ಯಾಪಾರವನ್ನು ಬೆಳೆಸಿ, ಎರಡು ವರ್ಷಗಳಾಗಿವೆ. ಕಂಪನಿಯು 30% ರಷ್ಟು ಹೆಚ್ಚಿನ ದರದ ಮಾರಾಟದೊಂದಿಗೆ ಬೆಳೆಯುತ್ತಿದೆ.

"G<sup>2</sup> Lotus Miles Ltd" ಕಂಪನಿಯು ಇದಕ್ಕೆ ಉದಾಹರಣೆಯಾಗಿದೆ:

1. ಸ್ವಾಧೀನ
2. ಫ್ರಾಂಚೈಸಿಂಗ್
3. ಸಮ್ಮಿಲನ
4. ಹೀರಿಕೊಳ್ಳುವಿಕೆ

**Options :**

485584134045. 1  
485584134046. 2  
485584134047. 3  
485584134048. 4

**Question Number : 148 Question Id : 48558433513 Question Type : MCQ Option Shuffling : No Is Question Mandatory : No Calculator : None Response Time : N.A Think Time : N.A Minimum Instruction Time : 0**

**Correct Marks : 5 Wrong Marks : 1**

**Question Key Details :**

Key	Value
-----	-------

Mergers: Read the case and answer the questions (46-50)

Gaurav owned an event management company called 'Lotus Ltd.' in Mumbai. He used to organise weddings, meetings, conferences, etc. These events were full of activities, music, food and entertainment. He used to outsource decoration material, food as well as entertainment from different vendors.

Ms. Geetika was an owner of catering and decoration company called Miles Ltd. in Mumbai. She used to cater the food and decoration needs of various customers such as corporate as well as family functions.

Gaurav & Geetika were performing well in their respective businesses until covid-19 lockdown was introduced. Due to lack of demand for food, decoration and events, both the companies started facing losses. As the lockdown was lifted, nearly after a year, both Gaurav and Geetika were facing problems in managing their increasing operational costs with lesser number of customers. As they were planning to look for better business opportunity, they got to meet each other at an 'exponential' organised by trades of Mumbai at BKC ground.

In this 'exponential', there were different traders sharing their business ideas with each other. Hence, it was here that Gaurav and Geetika decided to restart their business by merging their operations with a new company name. 'G<sup>2</sup> Lotus Miles Ltd'. They both shared their contacts of vendors and customers with each other and started getting order for events, food, decoration, entertainment, etc. Their business started blooming as their costs were lesser and more customers with demand of services given by Gaurav and Geetika.

Now its been two years that both of them have grown their business into other cities of Maharashtra like, Pune, Ahmednagar and Nagpur under the company name of 'G<sup>2</sup> Lotus Miles Ltd'. The company is growing with increased annual sales of 30%.

"G<sup>2</sup> Lotus Miles Ltd." is related to-

1. Manufacturing
2. Service
3. Distribution
4. Trading

**Options :**

485584134049. 1  
 485584134050. 2  
 485584134051. 3  
 485584134052. 4

**Question Number : 148 Question Id : 48558433513 Question Type : MCQ Option Shuffling : No Is Question Mandatory : No Calculator : None Response Time : N.A Think Time : N.A Minimum Instruction Time : 0**

**Correct Marks : 5 Wrong Marks : 1**

**Question Key Details :**

Key	Value
Comprehension	Comp2

ಪ್ರಕರಣವನ್ನು ಓದಿ ಮತ್ತು ಪ್ರಶ್ನೆಗಳಿಗೆ ಉತ್ತರಿಸಿ

ಗೌರವ ಮುಂಬೈನಲ್ಲಿ "ಲೋಟಸ್ ಲಿಮಿಟೆಡ್" ಎಂಬ ಈವೆಂಟ್ ಮ್ಯಾನೇಜ್‌ಮೆಂಟ್ ಕಂಪನಿಯನ್ನು ಹೊಂದಿದ್ದರು. ಅವರು ಮದುವೆಗಳು, ಸಭೆಗಳು, ಸಮ್ಮೇಳನಗಳು ಇತ್ಯಾದಿಗಳನ್ನು ಆಯೋಜಿಸುತ್ತಿದ್ದರು. ಈ ಘಟನೆಗಳು, ಚಟುವಟಿಕೆಗಳು ಸಂಗೀತ, ಆಹಾರ ಮತ್ತು ಮನೋರಂಜನೆಯನ್ನು ಒಳಗೊಂಡಿವೆ. ಅವರು ಡಿಫರೆನ್ಸ್ ಮಾರಾಟಗಾರರಿಂದ ಅಲಂಕಾರ ಸಾಮಗ್ರಿ, ಆಹಾರ ಮತ್ತು ಮನರಂಜನೆಯನ್ನು ಹೊರಗುತ್ತಿಗೆಗೆ ಬಳಸುತ್ತಿದ್ದರು.

Ms. ಗೀತಿಕಾ ಮುಂಬೈನಲ್ಲಿ ಮೈಲ್ಸ್ ಲಿಮಿಟೆಡ್ ಎಂಬ ಕ್ಯಾಟರಿಂಗ್ ಮತ್ತು ಡೆಕೋರೇಷನ್ ಕಂಪನಿಯ ಮಾಲೀಕರಾಗಿದ್ದರು. ವಿವಿಧ ಗ್ರಾಹಕರ ಆಹಾರ ಮತ್ತು ಅಲಂಕಾರದ ಅಗತ್ಯಗಳನ್ನು ಪೂರೈಸುತ್ತಿದ್ದರು. ಕೋವಿಡ್-19 ಲಾಕ್‌ಡೌನ್ ಅನ್ನು ಪರಿಚಯಿಸುವವರೆಗೂ ಗೌರವ ಮತ್ತು ಗೀತಿಕಾ ತಮ್ಮ ಪುನರಾವರ್ತಿತ ವ್ಯವಹಾರದಲ್ಲಿ ಉತ್ತಮವಾಗಿ ಕಾರ್ಯನಿರ್ವಹಿಸುತ್ತಿದ್ದರು. ಆಹಾರ, ಅಲಂಕಾರ, ಮತ್ತು ಕಾರ್ಯಕ್ರಮಗಳಿಗೆ ಬೇಡಿಕೆಯ ಕೊರತೆಯಿಂದಾಗಿ ಎರಡೂ ಘಟಕಗಳು ನಷ್ಟವನ್ನು ಎದುರಿಸಲಾರಂಭಿಸಿದವು. ಲಾಕ್‌ಡೌನ್ ಹಿಂತೆಗೆದುಕೊಂಡಂತೆ, ಸುಮಾರು ಒಂದು ವರ್ಷದ ನಂತರ ಗೌರವ ಮತ್ತು ಗೀತಿಕಾ ಇಬ್ಬರೂ ಕಡಿಮೆ ಸಂಖ್ಯೆಯ ಗ್ರಾಹಕರೊಂದಿಗೆ ತಮ್ಮ ಹೆಚ್ಚುತ್ತಿರುವ ಕಾರ್ಯಾಚರಣೆ ವೆಚ್ಚವನ್ನು ಹೆಚ್ಚಿಸುವಲ್ಲಿ ಸಮಸ್ಯೆಯನ್ನು ಎದುರಿಸುತ್ತಿದ್ದಾರೆ. ಅವರು ಉತ್ತಮ ವ್ಯಾಪಾರ ಅವಕಾಶವನ್ನು ಹುಡುಕಲು ಯೋಚಿಸುತ್ತಿರುವಾಗ ಅವರು ಬಿಕೆಸಿ ಮೈದಾನದಲ್ಲಿ ಮುಂಬೈನ ವ್ಯಾಪಾರದಿಂದ ಆಯೋಜಿಸಲಾದ 'ಎಕ್ಸ್‌ಪೋನೆಂಶಿಯಲ್' ನಲ್ಲಿ ಪರಸ್ಪರ ಭೇಟಿಯಾದರು.

ಈ ಎಕ್ಸ್‌ಪೋನೆಂಶಿಯಲ್‌ನಲ್ಲಿ ವಿಭಿನ್ನ ನೆಟ್ ಟ್ರೇಡ್‌ಗಳು ತಮ್ಮ ವ್ಯಾಪಾರದ ಐಡಿಯಾಗಳನ್ನು ಪರಸ್ಪರ ಹಂಚಿಕೊಳ್ಳುತ್ತಿದ್ದರು. ಆದ್ದರಿಂದ "G<sup>2</sup> Lotus Miles Ltd" ಎಂಬ ಹೊಸ ಕಂಪನಿಯ ಹೆಸರಿನೊಂದಿಗೆ ತಮ್ಮ ಕಾರ್ಯಾಚರಣೆಗಳನ್ನು ವಿಲೀನಗೊಳಿಸುವ ಮೂಲಕ ಗೌರವ ಮತ್ತು ಗೀತಿಕಾ ತಮ್ಮ ವ್ಯವಹಾರವನ್ನು ಮರುಪ್ರಾರಂಭಿಸಲು ನಿರ್ಧರಿಸಿದ್ದಾರೆ. ಅವರಿಬ್ಬರೂ ತಮ್ಮ ಮಾರಾಟಗಾರ ಮತ್ತು ಗ್ರಾಹಕರ ಸಂಪರ್ಕವನ್ನು ಪರಸ್ಪರ ಹಂಚಿಕೊಂಡರು ಮತ್ತು ಈವೆಂಟ್‌ಗಳಿಗೆ ಆಹಾರ, ಅಲಂಕಾರ ಮತ್ತು ಮನರಂಜನೆ ಇತ್ಯಾದಿಗಳಿಗೆ ಆರ್ಡರ್ ಪಡೆಯಲು ಪ್ರಾರಂಭಿಸಿದರು. ಅವರ ವ್ಯಾಪಾರವು ಬ್ಲಿಪ್‌ಮಿಂಗ್ ಅನ್ನು ಪ್ರಾರಂಭಿಸಿತು. ಏಕೆಂದರೆ, ಅವರ ವೆಚ್ಚಗಳು ಕಡಿಮೆ ಮತ್ತು ಹೆಚ್ಚಿನ ಗ್ರಾಹಕರು ನೀಡಿದ ಗೌರವ ಮತ್ತು ಗೀತಿಕಾ ಸೇರಿಯ ಬೇಡಿಕೆಯೊಂದಿಗೆ ಈಗ ಅವರಿಬ್ಬರೂ ಮಹಾರಾಷ್ಟ್ರದ ಇತರ ನಗರಗಳಾದ ಪುಣೆ, ಅಹ್ಮದ್‌ನಗರ ಮತ್ತು ನಾಗ್ಪುರಗಳಲ್ಲಿ "G<sup>2</sup> Lotus Miles Ltd" ಎಂಬ ಕಂಪನಿಯ ಹೆಸರಿನಲ್ಲಿ ವ್ಯಾಪಾರವನ್ನು ಬೆಳೆಸಿ, ಎರಡು ವರ್ಷಗಳಾಗಿವೆ. ಕಂಪನಿಯು 30% ರಷ್ಟು ಹೆಚ್ಚಿನ ದರದ ಮಾರಾಟದೊಂದಿಗೆ ಬೆಳೆಯುತ್ತಿದೆ.

"G<sup>2</sup> Lotus Miles Ltd" \_\_\_\_\_ ಗೆ ಸಂಬಂಧಿಸಿದೆ.

1. ಉತ್ಪಾದನೆ
2. ಸೇವೆ
3. ವಿತರಣೆ
4. ವ್ಯಾಪಾರ

**Options :**

485584134049. 1  
485584134050. 2  
485584134051. 3  
485584134052. 4

**Question Number : 149 Question Id : 48558433514 Question Type : MCQ Option Shuffling : No Is Question Mandatory : No Calculator : None Response Time : N.A Think Time : N.A Minimum Instruction Time : 0**

**Correct Marks : 5 Wrong Marks : 1**

**Question Key Details :**

Key	Value
-----	-------

Mergers: Read the case and answer the questions (46-50)

Gaurav owned an event management company called 'Lotus Ltd.' in Mumbai. He used to organise weddings, meetings, conferences, etc. These events were full of activities, music, food and entertainment. He used to outsource decoration material, food as well as entertainment from different vendors.

Ms. Geetika was an owner of catering and decoration company called Miles Ltd. in Mumbai. She used to cater the food and decoration needs of various customers such as corporate as well as family functions.

Gaurav & Geetika were performing well in their respective businesses until covid-19 lockdown was introduced. Due to lack of demand for food, decoration and events, both the companies started facing losses. As the lockdown was lifted, nearly after a year, both Gaurav and Geetika were facing problems in managing their increasing operational costs with lesser number of customers. As they were planning to look for better business opportunity, they got to meet each other at an 'exponential' organised by trades of Mumbai at BKC ground.

In this 'exponential', there were different traders sharing their business ideas with each other. Hence, it was here that Gaurav and Geetika decided to restart their business by merging their operations with a new company name. 'G<sup>2</sup> Lotus Miles Ltd'. They both shared their contacts of vendors and customers with each other and started getting order for events, food, decoration, entertainment, etc. Their business started blooming as their costs were lesser and more customers with demand of services given by Gaurav and Geetika.

Now it's been two years that both of them have grown their business into other cities of Maharashtra like, Pune, Ahmednagar and Nagpur under the company name of 'G<sup>2</sup> Lotus Miles Ltd'. The company is growing with increased annual sales of 30%.

Match List I with List II

LIST I		LIST II	
A.	Event Management Company	I.	Miles Ltd
B.	External Expansion	II.	Lotus Ltd.
C.	Operational synergy	III.	Merger
D.	Catering and decoration company	IV.	G <sup>2</sup> Lotus Miles Ltd

Choose the correct answer from the options given below:

1. A-I, B-III, C-II, D-IV
2. A-II, B-III, C-IV, D-I
3. A-III, B-II, C-IV, D-I
4. A-IV, B-III, C-II, D-I

**Options :**

485584134053. 1  
 485584134054. 2  
 485584134055. 3  
 485584134056. 4

**Question Number : 149 Question Id : 48558433514 Question Type : MCQ Option Shuffling : No Is Question Mandatory : No Calculator : None Response Time : N.A Think Time : N.A Minimum Instruction Time : 0 Correct Marks : 5 Wrong Marks : 1**

**Question Key Details :**

<b>Key</b>	<b>Value</b>
Comprehension	Comp2

ಪ್ರಕರಣವನ್ನು ಓದಿ ಮತ್ತು ಪ್ರಶ್ನೆಗಳಿಗೆ ಉತ್ತರಿಸಿ

ಗೌರವ್ ಮುಂಬೈನಲ್ಲಿ, “ಲೋಟಸ್ ಲಿಮಿಟೆಡ್” ಎಂಬ ಈವೆಂಟ್ ಮ್ಯಾನೇಜ್‌ಮೆಂಟ್ ಕಂಪನಿಯನ್ನು ಹೊಂದಿದ್ದರು. ಅವರು ಮದುವೆಗಳು, ಸಭೆಗಳು, ಸಮ್ಮೇಳನಗಳು ಇತ್ಯಾದಿಗಳನ್ನು ಆಯೋಜಿಸುತ್ತಿದ್ದರು. ಈ ಘಟನೆಗಳು, ಚಟುವಟಿಕೆಗಳು ಸಂಗೀತ, ಆಹಾರ ಮತ್ತು ಮನೋರಂಜನೆಯನ್ನು ಒಳಗೊಂಡಿವೆ. ಅವರು ಡಿಫರೆನ್ಸ್ ಮಾರಾಟಗಾರರಿಂದ ಅಲಂಕಾರ ಸಾಮಗ್ರಿ, ಆಹಾರ ಮತ್ತು ಮನರಂಜನೆಯನ್ನು ಹೊರಗುತ್ತಿಗೆಗೆ ಬಳಸುತ್ತಿದ್ದರು.

Ms. ಗೀತಿಕಾ ಮುಂಬೈನಲ್ಲಿ ಮೈಲ್ಸ್ ಲಿಮಿಟೆಡ್ ಎಂಬ ಕ್ಯಾಟರಿಂಗ್ ಮತ್ತು ಡೆಕೋರೇಷನ್ ಕಂಪನಿಯ ಮಾಲೀಕರಾಗಿದ್ದರು. ವಿವಿಧ ಗ್ರಾಹಕರ ಆಹಾರ ಮತ್ತು ಅಲಂಕಾರದ ಅಗತ್ಯಗಳನ್ನು ಪೂರೈಸುತ್ತಿದ್ದರು. ಕೋವಿಡ್-19 ಲಾಕ್‌ಡೌನ್ ಅನ್ನು ಪರಿಚಯಿಸುವವರೆಗೂ ಗೌರವ್ ಮತ್ತು ಗೀತಿಕಾ ತಮ್ಮ ಪುನರಾವರ್ತಿತ ವ್ಯವಹಾರದಲ್ಲಿ ಉತ್ತಮವಾಗಿ ಕಾರ್ಯನಿರ್ವಹಿಸುತ್ತಿದ್ದರು. ಆಹಾರ, ಅಲಂಕಾರ, ಮತ್ತು ಕಾರ್ಯಕ್ರಮಗಳಿಗೆ ಬೇಡಿಕೆಯ ಕೊರತೆಯಿಂದಾಗಿ ಎರಡೂ ಘಟಕಗಳು ನಷ್ಟವನ್ನು ಎದುರಿಸಲಾರಂಭಿಸಿದವು. ಲಾಕ್‌ಡೌನ್ ಹಿಂತೆಗೆದುಕೊಂಡಂತೆ, ಸುಮಾರು ಒಂದು ವರ್ಷದ ನಂತರ ಗೌರವ್ ಮತ್ತು ಗೀತಿಕಾ ಇಬ್ಬರೂ ಕಡಿಮೆ ಸಂಖ್ಯೆಯ ಗ್ರಾಹಕರೊಂದಿಗೆ ತಮ್ಮ ಹೆಚ್ಚುತ್ತಿರುವ ಕಾರ್ಯಾಚರಣೆ ವೆಚ್ಚವನ್ನು ಹೆಚ್ಚಿಸುವಲ್ಲಿ ಸಮಸ್ಯೆಯನ್ನು ಎದುರಿಸುತ್ತಿದ್ದಾರೆ. ಅವರು ಉತ್ತಮ ವ್ಯಾಪಾರ ಅವಕಾಶವನ್ನು ಹುಡುಕಲು ಯೋಚಿಸುತ್ತಿರುವಾಗ ಅವರು ಬಿಕೆಸಿ ಮೈದಾನದಲ್ಲಿ ಮುಂಬೈನ ವ್ಯಾಪಾರದಿಂದ ಆಯೋಜಿಸಲಾದ ‘ಎಕ್ಸ್‌ಪೋನೆಂಶಿಯಲ್’ ನಲ್ಲಿ ಪರಸ್ಪರ ಭೇಟಿಯಾದರು.

ಈ ಎಕ್ಸ್‌ಪೋನೆಂಶಿಯಲ್‌ನಲ್ಲಿ ವಿಭಿನ್ನ ನೆಟ್ ಟ್ರೇಡ್‌ಗಳು ತಮ್ಮ ವ್ಯಾಪಾರದ ಐಡಿಯಾಗಳನ್ನು ಪರಸ್ಪರ ಹಂಚಿಕೊಳ್ಳುತ್ತಿದ್ದರು. ಆದ್ದರಿಂದ “G<sup>2</sup> Lotus Miles Ltd” ಎಂಬ ಹೊಸ ಕಂಪನಿಯ ಹೆಸರಿನೊಂದಿಗೆ ತಮ್ಮ ಕಾರ್ಯಾಚರಣೆಗಳನ್ನು ವಿಲೀನಗೊಳಿಸುವ ಮೂಲಕ ಗೌರವ್ ಮತ್ತು ಗೀತಿಕಾ ತಮ್ಮ ವ್ಯವಹಾರವನ್ನು ಮರುಪ್ರಾರಂಭಿಸಲು ನಿರ್ಧರಿಸಿದ್ದಾರೆ. ಅವರಿಬ್ಬರೂ ತಮ್ಮ ಮಾರಾಟಗಾರ ಮತ್ತು ಗ್ರಾಹಕರ ಸಂಪರ್ಕವನ್ನು ಪರಸ್ಪರ ಹಂಚಿಕೊಂಡರು ಮತ್ತು ಈವೆಂಟ್‌ಗಳಿಗೆ ಆಹಾರ, ಅಲಂಕಾರ ಮತ್ತು ಮನರಂಜನೆ ಇತ್ಯಾದಿಗಳಿಗೆ ಆರ್ಡರ್ ಪಡೆಯಲು ಪ್ರಾರಂಭಿಸಿದರು. ಅವರ ವ್ಯಾಪಾರವು ಬ್ಲೂಮಿಂಗ್ ಅನ್ನು ಪ್ರಾರಂಭಿಸಿತು. ಏಕೆಂದರೆ, ಅವರ ವೆಚ್ಚಗಳು ಕಡಿಮೆ ಮತ್ತು ಹೆಚ್ಚಿನ ಗ್ರಾಹಕರು ನೀಡಿದ ಗೌರವ ಮತ್ತು ಗೀತಿಕಾ ಸೇರಿಯ ಬೇಡಿಕೆಯೊಂದಿಗೆ ಈಗ ಅವರಿಬ್ಬರೂ ಮಹಾರಾಷ್ಟ್ರದ ಇತರ ನಗರಗಳಾದ ಪುಣೆ, ಅಹ್ಮದ್‌ನಗರ ಮತ್ತು ನಾಗ್ಪುರಗಳಲ್ಲಿ “G<sup>2</sup> Lotus Miles Ltd” ಎಂಬ ಕಂಪನಿಯ ಹೆಸರಿನಲ್ಲಿ ವ್ಯಾಪಾರವನ್ನು ಬೆಳೆಸಿ, ಎರಡು ವರ್ಷಗಳಾಗಿವೆ. ಕಂಪನಿಯು 30% ರಷ್ಟು ಹೆಚ್ಚಿನ ದರದ ಮಾರಾಟದೊಂದಿಗೆ ಬೆಳೆಯುತ್ತಿದೆ.

ಪಟ್ಟಿ - I ಅನ್ನು ಪಟ್ಟಿ - IIರ ಜೊತೆ ಹೊಂದಿಸಿ.

ಪಟ್ಟಿ - I		ಪಟ್ಟಿ - II	
A.	ಈವೆಂಟ್ ಮ್ಯಾನೇಜ್‌ಮೆಂಟ್ ಕಂಪನಿ	I.	ಮೈಲ್ಸ್ ಲಿಮಿಟೆಡ್
B.	ಬಾಹ್ಯ ವಿಸ್ತರಣೆ	II.	ಲೋಟಸ್ ಲಿಮಿಟೆಡ್
C.	ಕಾರ್ಯಾಚರಣೆಯ ಸಿನರ್ಜಿ	III.	ವಿಲೀನ
D.	ಉತ್ತೋಪಚಾರ ಮತ್ತು ಅಲಂಕಾರ ಸಂಸ್ಥೆ	IV.	G <sup>2</sup> Lotus Miles Ltd

ಈ ಕೆಳಗಿನ ಆಯ್ಕೆಗಳಿಂದ ಸರಿಯಾದ ಉತ್ತರವನ್ನು ಆರಿಸಿ:

1. A-I, B-III, C-II, D-IV
2. A-II, B-III, C-IV, D-I
3. A-III, B-II, C-IV, D-I
4. A-IV, B-III, C-II, D-I

**Options :**

485584134053. 1  
485584134054. 2  
485584134055. 3  
485584134056. 4

**Question Number : 150 Question Id : 48558433515 Question Type : MCQ Option Shuffling : No Is Question Mandatory : No Calculator : None Response Time : N.A Think Time : N.A Minimum Instruction Time : 0**

**Correct Marks : 5 Wrong Marks : 1**

**Question Key Details :**

Key	Value
Comprehension	Comp2

Mergers: Read the case and answer the questions (46-50)

Gaurav owned an event management company called 'Lotus Ltd.' in Mumbai. He used to organise weddings, meetings, conferences, etc. These events were full of activities, music, food and entertainment. He used to outsource decoration material, food as well as entertainment from different vendors.

Ms. Geetika was an owner of catering and decoration company called Miles Ltd. in Mumbai. She used to cater the food and decoration needs of various customers such as corporate as well as family functions.

Gaurav & Geetika were performing well in their respective businesses until covid-19 lockdown was introduced. Due to lack of demand for food, decoration and events, both the companies started facing losses. As the lockdown was lifted, nearly after a year, both Gaurav and Geetika were facing problems in managing their increasing operational costs with lesser number of customers. As they were planning to look for better business opportunity, they got to meet each other at an 'exponential' organised by trades of Mumbai at BKC ground.

In this 'exponential', there were different traders sharing their business ideas with each other. Hence, it was here that Gaurav and Geetika decided to restart their business by merging their operations with a new company name. 'G<sup>2</sup> Lotus Miles Ltd'. They both shared their contacts of vendors and customers with each other and started getting order for events, food, decoration, entertainment, etc. Their business started blooming as their costs were lesser and more customers with demand of services given by Gaurav and Geetika.

Now its been two years that both of them have grown their business into other cities of Maharashtra like, Pune, Ahmednagar and Nagpur under the company name of 'G<sup>2</sup> Lotus Miles Ltd'. The company is growing with increased annual sales of 30%.

If Gaurav could raise sufficient funds to acquire 'Miles Ltd'. This acquisition would be called:

1. Friendly Acquisition
2. Reverse Acquisition
3. Back flip Acquisition
4. Hostile Acquisition

**Options :**

485584134057. 1  
485584134058. 2  
485584134059. 3  
485584134060. 4



Question Number : 150 Question Id : 48558433515 Question Type : MCQ Option Shuffling : No Is Question Mandatory : No Calculator : None Response Time : N.A Think Time : N.A Minimum Instruction Time : 0

Correct Marks : 5 Wrong Marks : 1

Question Key Details :

Key	Value
Comprehension	Comp2

ಪ್ರಕರಣವನ್ನು ಓದಿ ಮತ್ತು ಪ್ರಶ್ನೆಗಳಿಗೆ ಉತ್ತರಿಸಿ

ಗೌರವ್ ಮುಂಬೈನಲ್ಲಿ "ಲೋಟಸ್ ಲಿಮಿಟೆಡ್" ಎಂಬ ಈವೆಂಟ್ ಮ್ಯಾನೇಜ್‌ಮೆಂಟ್ ಕಂಪನಿಯನ್ನು ಹೊಂದಿದ್ದರು. ಅವರು ಮದುವೆಗಳು, ಸಭೆಗಳು, ಸಮ್ಮೇಳನಗಳು ಇತ್ಯಾದಿಗಳನ್ನು ಆಯೋಜಿಸುತ್ತಿದ್ದರು. ಈ ಘಟನೆಗಳು, ಚಟುವಟಿಕೆಗಳು ಸಂಗೀತ, ಆಹಾರ ಮತ್ತು ಮನೋರಂಜನೆಯನ್ನು ಒಳಗೊಂಡಿವೆ. ಅವರು ಡಿಫರೆನ್ಸ್ ಮಾರಾಟಗಾರರಿಂದ ಅಲಂಕಾರ ಸಾಮಗ್ರಿ, ಆಹಾರ ಮತ್ತು ಮನರಂಜನೆಯನ್ನು ಹೊರಗುತ್ತಿಗೆಗೆ ಬಳಸುತ್ತಿದ್ದರು.

Ms. ಗೀತಿಕಾ ಮುಂಬೈನಲ್ಲಿ ಮೈಲ್ಸ್ ಲಿಮಿಟೆಡ್ ಎಂಬ ಕ್ಯಾಟರಿಂಗ್ ಮತ್ತು ಡೆಕೋರೇಷನ್ ಕಂಪನಿಯ ಮಾಲೀಕರಾಗಿದ್ದರು. ವಿವಿಧ ಗ್ರಾಹಕರ ಆಹಾರ ಮತ್ತು ಅಲಂಕಾರದ ಅಗತ್ಯಗಳನ್ನು ಪೂರೈಸುತ್ತಿದ್ದರು. ಕೋವಿಡ್-19 ಲಾಕ್‌ಡೌನ್ ಅನ್ನು ಪರಿಚಯಿಸುವವರೆಗೂ ಗೌರವ್ ಮತ್ತು ಗೀತಿಕಾ ತಮ್ಮ ಪುನರಾವರ್ತಿತ ವ್ಯವಹಾರದಲ್ಲಿ ಉತ್ತಮವಾಗಿ ಕಾರ್ಯನಿರ್ವಹಿಸುತ್ತಿದ್ದರು. ಆಹಾರ, ಅಲಂಕಾರ, ಮತ್ತು ಕಾರ್ಯಕ್ರಮಗಳಿಗೆ ಬೇಡಿಕೆಯ ಕೊರತೆಯಿಂದಾಗಿ ಎರಡೂ ಘಟಕಗಳು ನಷ್ಟವನ್ನು ಎದುರಿಸಲಾರಂಭಿಸಿದವು. ಲಾಕ್‌ಡೌನ್ ಹಿಂತೆಗೆದುಕೊಂಡಂತೆ, ಸುಮಾರು ಒಂದು ವರ್ಷದ ನಂತರ ಗೌರವ್ ಮತ್ತು ಗೀತಿಕಾ ಇಬ್ಬರೂ ಕಡಿಮೆ ಸಂಖ್ಯೆಯ ಗ್ರಾಹಕರೊಂದಿಗೆ ತಮ್ಮ ಹೆಚ್ಚುತ್ತಿರುವ ಕಾರ್ಯಾಚರಣೆ ವೆಚ್ಚವನ್ನು ಹೆಚ್ಚಿಸುವಲ್ಲಿ ಸಮಸ್ಯೆಯನ್ನು ಎದುರಿಸುತ್ತಿದ್ದಾರೆ. ಅವರು ಉತ್ತಮ ವ್ಯಾಪಾರ ಅವಕಾಶವನ್ನು ಹುಡುಕಲು ಯೋಚಿಸುತ್ತಿರುವಾಗ ಅವರು ಬಿಕೆಸಿ ಮೈದಾನದಲ್ಲಿ ಮುಂಬೈನ ವ್ಯಾಪಾರದಿಂದ ಆಯೋಜಿಸಲಾದ 'ಎಕ್ಸ್‌ಪೋನೆಂಶಿಯಲ್' ನಲ್ಲಿ ಪರಸ್ಪರ ಭೇಟಿಯಾದರು.

ಈ ಎಕ್ಸ್‌ಪೋನೆಂಶಿಯಲ್‌ನಲ್ಲಿ ವಿಭಿನ್ನ ನೆಟ್ ಟ್ರೇಡ್‌ಗಳು ತಮ್ಮ ವ್ಯಾಪಾರದ ಐಡಿಯಾಗಳನ್ನು ಪರಸ್ಪರ ಹಂಚಿಕೊಳ್ಳುತ್ತಿದ್ದರು. ಆದ್ದರಿಂದ "G<sup>2</sup> Lotus Miles Ltd" ಎಂಬ ಹೊಸ ಕಂಪನಿಯ ಹೆಸರಿನೊಂದಿಗೆ ತಮ್ಮ ಕಾರ್ಯಾಚರಣೆಗಳನ್ನು ವಿಲೀನಗೊಳಿಸುವ ಮೂಲಕ ಗೌರವ್ ಮತ್ತು ಗೀತಿಕಾ ತಮ್ಮ ವ್ಯವಹಾರವನ್ನು ಮರುಪ್ರಾರಂಭಿಸಲು ನಿರ್ಧರಿಸಿದ್ದಾರೆ. ಅವರಿಬ್ಬರೂ ತಮ್ಮ ಮಾರಾಟಗಾರ ಮತ್ತು ಗ್ರಾಹಕರ ಸಂಪರ್ಕವನ್ನು ಪರಸ್ಪರ ಹಂಚಿಕೊಂಡರು ಮತ್ತು ಈವೆಂಟ್‌ಗಳಿಗೆ ಆಹಾರ, ಅಲಂಕಾರ ಮತ್ತು ಮನರಂಜನೆ ಇತ್ಯಾದಿಗಳಿಗೆ ಆರ್ಡರ್ ಪಡೆಯಲು ಪ್ರಾರಂಭಿಸಿದರು. ಅವರ ವ್ಯಾಪಾರವು ಬ್ಲೂಮಿಂಗ್ ಅನ್ನು ಪ್ರಾರಂಭಿಸಿತು. ಏಕೆಂದರೆ, ಅವರ ವೆಚ್ಚಗಳು ಕಡಿಮೆ ಮತ್ತು ಹೆಚ್ಚಿನ ಗ್ರಾಹಕರು ನೀಡಿದ ಗೌರವ ಮತ್ತು ಗೀತಿಕಾ ಸೇರಿಯ ಬೇಡಿಕೆಯೊಂದಿಗೆ ಈಗ ಅವರಿಬ್ಬರೂ ಮಹಾರಾಷ್ಟ್ರದ ಇತರ ನಗರಗಳಾದ ಪುಣೆ, ಅಹ್ಮದಾಬಾದ್ ಮತ್ತು ನಾಗ್ಪುರಗಳಲ್ಲಿ "G<sup>2</sup> Lotus Miles Ltd" ಎಂಬ ಕಂಪನಿಯ ಹೆಸರಿನಲ್ಲಿ ವ್ಯಾಪಾರವನ್ನು ಬೆಳೆಸಿ, ಎರಡು ವರ್ಷಗಳಾಗಿವೆ. ಕಂಪನಿಯು 30% ರಷ್ಟು ಹೆಚ್ಚಿನ ದರದ ಮಾರಾಟದೊಂದಿಗೆ ಬೆಳೆಯುತ್ತಿದೆ.

ಗೌರವ್ ಏನಾದರೂ ಬೇಕಿರುವಷ್ಟು ಹಣ ಮೈಲ್ಸ್ ಲಿಮಿಟೆಡ್ ಅನ್ನು ಸ್ವಾಧೀನ ಪಡಿಸಿಕೊಳ್ಳಲು ಹೊಂದಿದ್ದರೆ, ಈ ಸ್ವಾಧೀನವನ್ನು ಈ ರೀತಿ ಕರೆಯುತ್ತಾರೆ:

1. ಸ್ನೇಹಪರ ಸ್ವಾಧೀನ
2. ಹಿಮ್ಮುಖ ಸ್ವಾಧೀನ
3. ಬ್ಯಾಕ್‌ಫಿಲ್ ಸ್ವಾಧೀನ
4. ಪ್ರತಿಕೂಲ ಸ್ವಾಧೀನ

Options :

485584134057. 1
485584134058. 2
485584134059. 3
485584134060. 4

## Geography

Group Number :	7
Group Id :	485584745
Group Maximum Duration :	45
Group Minimum Duration :	45
Show Attended Group? :	No
Edit Attended Group? :	No
Break time :	0
Group Marks :	200
Is this Group for Examiner? :	No
Examiner permission :	Cant View
Show Progress Bar? :	No

## Geography

Section Id :	485584859
Section Number :	1
Section type :	Online
Mandatory or Optional :	Mandatory
Number of Questions :	50
Number of Questions to be attempted :	40
Section Marks :	200
Enable Mark as Answered Mark for Review and Clear Response :	Yes
Maximum Instruction Time :	0
Sub-Section Number :	1
Sub-Section Id :	4855842425
Question Shuffling Allowed :	Yes
Is Section Default? :	null

Question Number : 151 Question Id : 48558433216 Question Type : MCQ Option Shuffling : No Is Question Mandatory : No Calculator : None Response Time : N.A Think Time : N.A Minimum Instruction Time : 0

Correct Marks : 5 Wrong Marks : 1

Question Key Details :

Key	Value
Comprehension	MCQ

"Human Geography is the synthetic study of relationship between human societies and earth's surface" among the following who gave the above definition on Human Geography.

1. Paul Vidal de la Blache
2. Ellen C Semple
3. Ratzel
4. Ralph W. Emerson

Options :

- 485584132861. 1
- 485584132862. 2

485584132863. 3

485584132864. 4

**Question Number : 152 Question Id : 48558433217 Question Type : MCQ Option Shuffling : No Is Question Mandatory : No Calculator : None Response Time : N.A Think Time : N.A Minimum Instruction Time : 0**

**Correct Marks : 5 Wrong Marks : 1**

**Question Key Details :**

Key	Value
Comprehension	MCQ

Which one of the following is the name of Ethiopian capital?

1. Al Qahirah
2. Tehran
3. Canberra
4. Addis Ababa

**Options :**

485584132865. 1

485584132866. 2

485584132867. 3

485584132868. 4

**Question Number : 153 Question Id : 48558433218 Question Type : MCQ Option Shuffling : No Is Question Mandatory : No Calculator : None Response Time : N.A Think Time : N.A Minimum Instruction Time : 0**

**Correct Marks : 5 Wrong Marks : 1**

**Question Key Details :**

Key	Value
Comprehension	MCQ

What is the percentage of world population living in urban areas in 2017?

1. 37%
2. 48%
3. 58%
4. 54%

**Options :**

485584132869. 1

485584132870. 2

485584132871. 3

485584132872. 4

**Question Number : 154 Question Id : 48558433219 Question Type : MCQ Option Shuffling : No Is Question Mandatory : No Calculator : None Response Time : N.A Think Time : N.A Minimum Instruction Time : 0**

**Correct Marks : 5 Wrong Marks : 1**

**Question Key Details :**

Key	Value
-----	-------

Comprehension	MCQ
---------------	-----

Which one of the following is not the approach of human Geography?

1. Regional Analysis
2. Areal Differentiation
3. Technological Analysis
4. Post-Modernism

**Options :**

485584132873. 1  
485584132874. 2  
485584132875. 3  
485584132876. 4

**Question Number : 155 Question Id : 48558433220 Question Type : MCQ Option Shuffling : No Is Question Mandatory : No Calculator : None Response Time : N.A Think Time : N.A Minimum Instruction Time : 0**

**Correct Marks : 5 Wrong Marks : 1**

**Question Key Details :**

Key	Value
Comprehension	MCQ

Who introduced stop and go determinism?

1. Ratzal
2. Ellian sample
3. Griffith Taylor
4. Paul Vidal de la Blache

**Options :**

485584132877. 1  
485584132878. 2  
485584132879. 3  
485584132880. 4

**Question Number : 156 Question Id : 48558433221 Question Type : MCQ Option Shuffling : No Is Question Mandatory : No Calculator : None Response Time : N.A Think Time : N.A Minimum Instruction Time : 0**

**Correct Marks : 5 Wrong Marks : 1**

**Question Key Details :**

Key	Value
Comprehension	MCQ

"This happens when the birth rate is more than the death rate between two points of time" choose the right from the following.

1. Stationary Population
2. Actual Growth of Population
3. Negative Growth of Population
4. Positive Growth of Population

**Options :**

- 485584132881. 1
- 485584132882. 2
- 485584132883. 3
- 485584132884. 4

**Question Number : 157 Question Id : 48558433222 Question Type : MCQ Option Shuffling : No Is Question Mandatory : No Calculator : None Response Time : N.A Think Time : N.A Minimum Instruction Time : 0**

**Correct Marks : 5 Wrong Marks : 1**

**Question Key Details :**

Key	Value
Comprehension	MCQ

The 'Alaskan Highway' links which of the following?

1. British Colombia to St. John city
2. Edmonton to Anchorage
3. Darwin to Malborne
4. Algiers to Conakry

**Options :**

- 485584132885. 1
- 485584132886. 2
- 485584132887. 3
- 485584132888. 4

**Question Number : 158 Question Id : 48558433223 Question Type : MCQ Option Shuffling : No Is Question Mandatory : No Calculator : None Response Time : N.A Think Time : N.A Minimum Instruction Time : 0**

**Correct Marks : 5 Wrong Marks : 1**

**Question Key Details :**

Key	Value
Comprehension	MCQ

When and by whom Human development index was created?

1. Prof A. Shaws (1991)
2. Prof Amartya Sen, 1990
3. Dr. Mahbub-Ul-Haq, 1990
4. Prof Amartya Sen 1991

**Options :**

- 485584132889. 1
- 485584132890. 2
- 485584132891. 3
- 485584132892. 4

**Question Number : 159 Question Id : 48558433224 Question Type : MCQ Option Shuffling : No Is Question Mandatory : No Calculator : None Response Time : N.A Think Time : N.A Minimum Instruction Time : 0**

**Correct Marks : 5 Wrong Marks : 1**

**Question Key Details :**

Key	Value
Comprehension	MCQ

Famous pipeline 'Big Inch' is located in \_\_\_\_\_.

1. Saudi Arabia
2. Qutar
3. USA
4. Venezuela

**Options :**

- 485584132893. 1
- 485584132894. 2
- 485584132895. 3
- 485584132896. 4

**Question Number : 160 Question Id : 48558433225 Question Type : MCQ Option Shuffling : No Is Question Mandatory : No Calculator : None Response Time : N.A Think Time : N.A Minimum Instruction Time : 0**

**Correct Marks : 5 Wrong Marks : 1**

**Question Key Details :**

Key	Value
Comprehension	MCQ

How many of the following cities in world have attained the million status at the beginning of 2005.

1. 206
2. 437
3. 469
4. 438

**Options :**

- 485584132897. 1
- 485584132898. 2
- 485584132899. 3
- 485584132900. 4

**Question Number : 161 Question Id : 48558433226 Question Type : MCQ Option Shuffling : No Is Question Mandatory : No Calculator : None Response Time : N.A Think Time : N.A Minimum Instruction Time : 0**

**Correct Marks : 5 Wrong Marks : 1**

**Question Key Details :**

Key	Value
Comprehension	MCQ

Which among the following is not a factor that discourage women to migrate from rural to urban areas?

1. Shortage of housing
2. Paucity of job opportunities
3. Low cost of living
4. Lack of security in cities

**Options :**

- 485584132901. 1
- 485584132902. 2
- 485584132903. 3
- 485584132904. 4

**Question Number : 162 Question Id : 48558433227 Question Type : MCQ Option Shuffling : No Is Question Mandatory : No Calculator : None Response Time : N.A Think Time : N.A Minimum Instruction Time : 0**

**Correct Marks : 5 Wrong Marks : 1**

**Question Key Details :**

Key	Value
Comprehension	MCQ

In the Age sex pyramid a narrow base and a tapered top represents which of the following?

1. Declining Population Pyramid
2. Constant Population Pyramid
3. Expanding Population Pyramid
4. Triangular Shaped Pyramid

**Options :**

- 485584132905. 1
- 485584132906. 2
- 485584132907. 3
- 485584132908. 4

**Question Number : 163 Question Id : 48558433228 Question Type : MCQ Option Shuffling : No Is Question Mandatory : No Calculator : None Response Time : N.A Think Time : N.A Minimum Instruction Time : 0**

**Correct Marks : 5 Wrong Marks : 1**

**Question Key Details :**

Key	Value
Comprehension	MCQ

Which one of the following states of India has the highest female literacy?

1. Tamil Nadu
2. Punjab
3. Haryana
4. Kerala

**Options :**

- 485584132909. 1
- 485584132910. 2
- 485584132911. 3
- 485584132912. 4

**Question Number : 164 Question Id : 48558433229 Question Type : MCQ Option Shuffling : No Is Question Mandatory : No Calculator : None Response Time : N.A Think Time : N.A Minimum Instruction Time : 0**

**Correct Marks : 5 Wrong Marks : 1**

**Question Key Details :**

Key	Value
Comprehension	MCQ



The first complete census was conducted in India in which year ?

1. 1861
2. 1871
3. 1881
4. 1891

**Options :**

485584132913. 1  
485584132914. 2  
485584132915. 3  
485584132916. 4

**Question Number : 165 Question Id : 48558433230 Question Type : MCQ Option Shuffling : No Is Question Mandatory : No Calculator : None Response Time : N.A Think Time : N.A Minimum Instruction Time : 0**

**Correct Marks : 5 Wrong Marks : 1**

**Question Key Details :**

Key	Value
Comprehension	MCQ

How many Railway Zones are there in India?

1. 12
2. 14
3. 15
4. 16

**Options :**

485584132917. 1  
485584132918. 2  
485584132919. 3  
485584132920. 4

**Question Number : 166 Question Id : 48558433231 Question Type : MCQ Option Shuffling : No Is Question Mandatory : No Calculator : None Response Time : N.A Think Time : N.A Minimum Instruction Time : 0**

**Correct Marks : 5 Wrong Marks : 1**

**Question Key Details :**

Key	Value
Comprehension	MCQ

According to Grierson (Linguistic Survey of India 1903-1928) how many languages were there in India?

1. 544
2. 22
3. 179
4. 267

**Options :**

485584132921. 1  
485584132922. 2  
485584132923. 3  
485584132924. 4

**Question Number : 167 Question Id : 48558433232 Question Type : MCQ Option Shuffling : No Is Question Mandatory : No Calculator : None Response Time : N.A Think Time : N.A Minimum Instruction Time : 0**

**Correct Marks : 5 Wrong Marks : 1**

**Question Key Details :**

Key	Value
Comprehension	MCQ

Which phase is referred to as the period of population explosion in India?

1. Phase I (1901-1921)
2. Phase II (1921-1951)
3. Phase III (1951-1981)
4. Phase IV (Post 1981 till present)

**Options :**

485584132925. 1  
485584132926. 2  
485584132927. 3  
485584132928. 4

**Question Number : 168 Question Id : 48558433233 Question Type : MCQ Option Shuffling : No Is Question Mandatory : No Calculator : None Response Time : N.A Think Time : N.A Minimum Instruction Time : 0**

**Correct Marks : 5 Wrong Marks : 1**

**Question Key Details :**

Key	Value
Comprehension	MCQ

Which one of the following town / cities has not been developed as an administrative headquarters after Independence?

1. Jamshedpur
2. Chandigarh
3. Gandhinagar
4. Dispur

**Options :**

485584132929. 1  
485584132930. 2  
485584132931. 3  
485584132932. 4

**Question Number : 169 Question Id : 48558433234 Question Type : MCQ Option Shuffling : No Is Question Mandatory : No Calculator : None Response Time : N.A Think Time : N.A Minimum Instruction Time : 0**

**Correct Marks : 5 Wrong Marks : 1**

**Question Key Details :**

Key	Value
Comprehension	MCQ

The famous Nehru Trophy Boat Race (Vallamkali) is held in the backwater of which of the following?

1. Andhra Pradesh
2. Goa
3. Karnataka
4. Kerala

**Options :**

485584132933. 1  
485584132934. 2  
485584132935. 3  
485584132936. 4

**Question Number : 170 Question Id : 48558433235 Question Type : MCQ Option Shuffling : No Is Question Mandatory : No Calculator : None Response Time : N.A Think Time : N.A Minimum Instruction Time : 0**

**Correct Marks : 5 Wrong Marks : 1**

**Question Key Details :**

Key	Value
Comprehension	MCQ

Which one among the following classes comprises the maximum number of town / cities in India as per Census of India 2011?

1. Class II
2. Class III
3. Class IV
4. Class V

**Options :**

485584132937. 1  
485584132938. 2  
485584132939. 3  
485584132940. 4

**Question Number : 171 Question Id : 48558433236 Question Type : MCQ Option Shuffling : No Is Question Mandatory : No Calculator : None Response Time : N.A Think Time : N.A Minimum Instruction Time : 0**

**Correct Marks : 5 Wrong Marks : 1**

**Question Key Details :**

Key	Value
Comprehension	MCQ

Which one of the following is an example of Ancient Town in India?

1. Prayag
2. Hyderabad
3. Delhi
4. Mumbai

**Options :**

485584132941. 1  
485584132942. 2  
485584132943. 3  
485584132944. 4

**Question Number : 172 Question Id : 48558433237 Question Type : MCQ Option Shuffling : No Is Question Mandatory : No Calculator : None Response Time : N.A Think Time : N.A Minimum Instruction Time : 0**

**Correct Marks : 5 Wrong Marks : 1**

**Question Key Details :**

Key	Value
Comprehension	MCQ

Which of the following Indian state has the highest density of population?

1. Bihar
2. Kerala
3. Uttar Pradesh
4. West Bengal

**Options :**

485584132945. 1  
485584132946. 2  
485584132947. 3  
485584132948. 4

**Question Number : 173 Question Id : 48558433238 Question Type : MCQ Option Shuffling : No Is Question Mandatory : No Calculator : None Response Time : N.A Think Time : N.A Minimum Instruction Time : 0**

**Correct Marks : 5 Wrong Marks : 1**

**Question Key Details :**

Key	Value
Comprehension	MCQ

The Ocean noise levels in 2003-04 were about \_\_\_\_\_ higher than in 1964-1966.

1. 20 decibels
2. 10-12 decibels
3. 5 decibels
4. 15-18 decibels

**Options :**

485584132949. 1  
485584132950. 2  
485584132951. 3  
485584132952. 4

**Question Number : 174 Question Id : 48558433239 Question Type : MCQ Option Shuffling : No Is Question Mandatory : No Calculator : None Response Time : N.A Think Time : N.A Minimum Instruction Time : 0**

**Correct Marks : 5 Wrong Marks : 1**

**Question Key Details :**

Key	Value
Comprehension	MCQ

Which one of the following contributes to the maximum length of the roads in India?

1. National Highway
2. State Highway
3. Districts Roads
4. Rural Roads

**Options :**

485584132953. 1  
485584132954. 2  
485584132955. 3  
485584132956. 4

**Question Number : 175 Question Id : 48558433240 Question Type : MCQ Option Shuffling : No Is Question Mandatory : No Calculator : None Response Time : N.A Think Time : N.A Minimum Instruction Time : 0**

**Correct Marks : 5 Wrong Marks : 1**

**Question Key Details :**

Key	Value
Comprehension	MCQ

Which one of the following is an Inland Port?

1. Kochhi Port
2. Ennore Port
3. Kolkata Port
4. Haldia Port

**Options :**

485584132957. 1  
485584132958. 2  
485584132959. 3  
485584132960. 4

**Question Number : 176 Question Id : 48558433241 Question Type : MCQ Option Shuffling : No Is Question Mandatory : No Calculator : None Response Time : N.A Think Time : N.A Minimum Instruction Time : 0**

**Correct Marks : 5 Wrong Marks : 1**

**Question Key Details :**

Key	Value
Comprehension	MCQ

Arrange the following approaches in the order?

- A. Spatial organization
- B. Exploration and description
- C. Post modernism in geography
- D. Regional Analysis

Choose the correct answer from the options given below:

- 1. A, C, B, D
- 2. B, D, A, C
- 3. C, D, B, A
- 4. D, A, C, B

**Options :**

- 485584132961. 1
- 485584132962. 2
- 485584132963. 3
- 485584132964. 4

**Question Number : 177 Question Id : 48558433242 Question Type : MCQ Option Shuffling : No Is Question Mandatory : No Calculator : None Response Time : N.A Think Time : N.A Minimum Instruction Time : 0**

**Correct Marks : 5 Wrong Marks : 1**

**Question Key Details :**

Key	Value
Comprehension	MCQ

Arrange the following continents in descending order of population density

- A. North America
- B. Africa
- C. Oceania
- D. Asia

Choose the correct answer from the options given below:

- 1. D, B, A, C
- 2. D, C, B, A
- 3. D, A, B, C
- 4. D, A, C, B

**Options :**

- 485584132965. 1
- 485584132966. 2
- 485584132967. 3
- 485584132968. 4

**Question Number : 178 Question Id : 48558433243 Question Type : MCQ Option Shuffling : No Is Question Mandatory : No Calculator : None Response Time : N.A Think Time : N.A Minimum Instruction Time : 0**

**Correct Marks : 5 Wrong Marks : 1**

**Question Key Details :**

Key	Value
Comprehension	MCQ

Arrange the below mentioned Urban classification in correct sequence (small to large).

- A. City
- B. Conurbation
- C. Megalopolis
- D. Million City

Choose the correct answer from the options given below:

- 1. A, B, C, D
- 2. A, D, B, C
- 3. A, C, B, D
- 4. C, B, D, A

**Options :**

- 485584132969. 1
- 485584132970. 2
- 485584132971. 3
- 485584132972. 4

**Question Number : 179 Question Id : 48558433244 Question Type : MCQ Option Shuffling : No Is Question Mandatory : No Calculator : None Response Time : N.A Think Time : N.A Minimum Instruction Time : 0**

**Correct Marks : 5 Wrong Marks : 1**

**Question Key Details :**

Key	Value
Comprehension	MCQ

Arrange the below mentioned technology phases with population growth periods in correct order from birth of Christ to Present.

- A. Biotechnology
- B. Age of European exploration and colonization
- C. Information and computers
- D. Transportation development

Choose the correct answer from the options given below:

- 1. B, D, A, C
- 2. B, D, C, A
- 3. B, C, D, A
- 4. B, A, D, C



**Options :**

- 485584132973. 1
- 485584132974. 2
- 485584132975. 3
- 485584132976. 4

**Question Number : 180 Question Id : 48558433245 Question Type : MCQ Option Shuffling : No Is Question Mandatory : No Calculator : None Response Time : N.A Think Time : N.A Minimum Instruction Time : 0**

**Correct Marks : 5 Wrong Marks : 1**

**Question Key Details :**

Key	Value
Comprehension	MCQ

Arrange the following airports of India from east to west.

- A. Shillong
- B. Allahabad
- C. Udaipur
- D. Patna

Choose the correct answer from the options given below:

- 1. A, D, B, C
- 2. A, D, C, B
- 3. D, A, C, B
- 4. D, A, B, C

**Options :**

- 485584132977. 1
- 485584132978. 2
- 485584132979. 3
- 485584132980. 4

**Question Number : 181 Question Id : 48558433246 Question Type : MCQ Option Shuffling : No Is Question Mandatory : No Calculator : None Response Time : N.A Think Time : N.A Minimum Instruction Time : 0**

**Correct Marks : 5 Wrong Marks : 1**

**Question Key Details :**

Key	Value
Comprehension	MCQ

Choose indicators used to assess Human Development Index from below.

- A. Purchasing Power
- B. Happiness
- C. Life expectancy at Birth
- D. Gross Enrollment Ratio

Choose the correct answer from the options given below:

1. A, B, D only
2. A, C, D only
3. B, C, D only
4. B, A, C only

**Options :**

- 485584132981. 1
- 485584132982. 2
- 485584132983. 3
- 485584132984. 4

**Question Number : 182 Question Id : 48558433247 Question Type : MCQ Option Shuffling : No Is Question Mandatory : No Calculator : None Response Time : N.A Think Time : N.A Minimum Instruction Time : 0**

**Correct Marks : 5 Wrong Marks : 1**

**Question Key Details :**

Key	Value
Comprehension	MCQ

Major areas of rice production are:

- A. Bihar
- B. Karnataka
- C. West Bengal
- D. Chhattisgarh

Choose the correct answer from the options given below:

1. A, B and D only
2. B, C and D only
3. A, C and D only
4. A, B and C only

**Options :**

- 485584132985. 1
- 485584132986. 2
- 485584132987. 3
- 485584132988. 4

**Question Number : 183 Question Id : 48558433248 Question Type : MCQ Option Shuffling : No Is Question Mandatory : No Calculator : None Response Time : N.A Think Time : N.A Minimum Instruction Time : 0**

**Correct Marks : 5 Wrong Marks : 1**

**Question Key Details :**

Key	Value
Comprehension	MCQ

Read the following about Indira Gandhi Canal Command Area carefully.

- A. Indira Gandhi Canal was previously known as the Rajasthan Canal.
- B. The Canal Project was launched on 31 March ,1948.
- C. The Canal originates at Herike barrage in Punjab.
- D. They command area of stage-I lies in Ganganagar, Hanumangarh and northern part of Bikaner districts.

Choose the correct answer from the options given below:

- 1. A, B and C only
- 2. A, B and D only
- 3. A, C and D only
- 4. B, C and D only

**Options :**

- 485584132989. 1
- 485584132990. 2
- 485584132991. 3
- 485584132992. 4

**Question Number : 184 Question Id : 48558433249 Question Type : MCQ Option Shuffling : No Is Question Mandatory : No Calculator : None Response Time : N.A Think Time : N.A Minimum Instruction Time : 0**

**Correct Marks : 5 Wrong Marks : 1**

**Question Key Details :**

Key	Value
Comprehension	MCQ

Read the following statements about the North Western region of India carefully.

- A. Rajasthan is rich in building stones i.e. sandstone, granite, marble.
- B. Gujarat does not have petroleum deposits.
- C. Gujarat and Rajasthan both have rich source of salt
- D. This region provide raw material for Cement Industry

Choose the correct answer from the options given below:

- 1. A, B and C only
- 2. A, B and D only
- 3. A, C and D only
- 4. B, C and D only

**Options :**

485584132993. 1  
485584132994. 2  
485584132995. 3  
485584132996. 4

**Question Number : 185 Question Id : 48558433250 Question Type : MCQ Option Shuffling : No Is Question Mandatory : No Calculator : None Response Time : N.A Think Time : N.A Minimum Instruction Time : 0**

**Correct Marks : 5 Wrong Marks : 1**

**Question Key Details :**

Key	Value
Comprehension	MCQ

Which are the characteristics of Mechanised grain farming?

- A. It is practised in the semi-arid land of mid-latitudes.
- B. The size of the farm is too large.
- C. Variety of crops are grown with livestock.
- D. Entire operations of cultivation are mechanised.

Choose the correct answer from the options given below:

- 1. B, C and D only
- 2. A, B and D only
- 3. A, C and D only
- 4. A, B and C only

**Options :**

485584132997. 1  
485584132998. 2  
485584132999. 3  
485584133000. 4

**Question Number : 186 Question Id : 48558433251 Question Type : MCQ Option Shuffling : No Is Question Mandatory : No Calculator : None Response Time : N.A Think Time : N.A Minimum Instruction Time : 0**

**Correct Marks : 5 Wrong Marks : 1**

**Question Key Details :**

Key	Value
Comprehension	MCQ

Match List I with List II

LIST I (Country)		LIST II (Mega city)	
A.	Peru	I.	Jakarta
B.	Indonesia	II.	Manila
C.	Brazil	III.	Lima
D.	Philippines	IV.	Sao Paulo

Choose the correct answer from the options given below:

1. A-III, B-II, C-II, D-IV
2. A-III, B-I, C-IV, D-II
3. A-IV, B-II, C-I, D-III
4. A-IV, B-III, C-II, D-I

**Options :**

485584133001. 1  
485584133002. 2  
485584133003. 3  
485584133004. 4

**Question Number : 187 Question Id : 48558433252 Question Type : MCQ Option Shuffling : No Is Question Mandatory : No Calculator : None Response Time : N.A Think Time : N.A Minimum Instruction Time : 0**

**Correct Marks : 5 Wrong Marks : 1**

**Question Key Details :**

Key	Value
Comprehension	MCQ

Match List I with List II

LIST I Pollution		LIST II Sources of pollution	
A.	Air pollution	I.	Urban run-off
B.	Water pollution	II.	Advertising media
C.	Land pollution	III.	Combustion of biofuels
D.	Noise pollution	IV.	Improper human activities

Choose the correct answer from the options given below:

1. A-IV, B-I, C-II, D-III
2. A-IV, B-II, C-III, D-I
3. A-III, B-I, C-IV, D-II
4. A-III, B-II, C-I, D-IV

**Options :**

485584133005. 1  
485584133006. 2  
485584133007. 3  
485584133008. 4

**Question Number : 188 Question Id : 48558433253 Question Type : MCQ Option Shuffling : No Is Question Mandatory : No Calculator : None Response Time : N.A Think Time : N.A Minimum Instruction Time : 0**

**Correct Marks : 5 Wrong Marks : 1**

**Question Key Details :**

Key	Value
Comprehension	MCQ

Match List I with List II

LIST I States		LIST II Ports	
A.	Gujarat	I.	Mangaluru
B.	Maharashtra	II.	Kandla
C.	Karnataka	III.	Kochchi
D.	Kerala	IV.	Jawaharlal Nehru Port

Choose the correct answer from the options given below:

1. A-II, B-I, C-III, D-IV
2. A-II, B-IV, C-I, D-III
3. A-II, B-IV, C-III, D-I
4. A-IV, B-II, C-I, D-III

**Options :**

- 485584133009. 1
- 485584133010. 2
- 485584133011. 3
- 485584133012. 4

**Question Number : 189 Question Id : 48558433254 Question Type : MCQ Option Shuffling : No Is Question Mandatory : No Calculator : None Response Time : N.A Think Time : N.A Minimum Instruction Time : 0**

**Correct Marks : 5 Wrong Marks : 1**

**Question Key Details :**

Key	Value
Comprehension	MCQ

Match List I with List II

LIST I (Mining area)		LIST II (State)	
A.	kendujhar	I.	Maharashtra
B.	Ratnagiri	II.	Madhya Pradesh
C.	katni	III.	Rajasthan
D.	khetri	IV.	Odisha

Choose the correct answer from the options given below:

1. A-II, B-I, C-IV, D-III
2. A-IV, B-I, C-II, D-III
3. A-IV, B-II, C-III, D-I
4. A-II, B-III, C-IV, D-I

**Options :**

485584133013. 1  
485584133014. 2  
485584133015. 3  
485584133016. 4

**Question Number : 190 Question Id : 48558433255 Question Type : MCQ Option Shuffling : No Is Question Mandatory : No Calculator : None Response Time : N.A Think Time : N.A Minimum Instruction Time : 0**

**Correct Marks : 5 Wrong Marks : 1**

**Question Key Details :**

Key	Value
Comprehension	MCQ

Match List I with List II

LIST I Specialised functions		LIST II Port	
A.	Ports of Call	I.	Copenhagen
B.	Packet Station	II.	Kochi
C.	Entrepot Ports	III.	Aden
D.	Navel Ports	IV.	Dover

Choose the correct answer from the options given below:

1. A-III, B-IV, C-I, D-II
2. A-II, B-III, C-IV, D-I
3. A-I, B-II, C-III, D-IV
4. A-IV, B-I, C-II, D-III

**Options :**

485584133017. 1

485584133018. 2  
485584133019. 3  
485584133020. 4

**Sub-Section Number :** 2  
**Sub-Section Id :** 4855842426  
**Question Shuffling Allowed :** No  
**Is Section Default? :** null

**Question Number : 191 Question Id : 48558433256 Question Type : MCQ Option Shuffling : No Is Question Mandatory : No Calculator : None Response Time : N.A Think Time : N.A Minimum Instruction Time : 0**

**Correct Marks : 5 Wrong Marks : 1**

**Question Key Details :**

Key	Value
Comprehension	Comp1

Read the passage and answer 5 questions that follow:

High technology, or simply high-tech, is the latest generation of manufacturing activities. It is best understood as the application of intensive research and development (R and D) efforts leading to the manufacture of products of an advanced scientific and engineering character. Professional (white collar) workers make up a large share of the total workforce. These highly skilled specialists greatly outnumber the actual production (blue collar) workers. Robotics on the assembly line, computer-aided design (CAD) and manufacturing, electronic controls of smelting and refining processes, and the constant development of new chemical and pharmaceutical products are notable examples of a high-tech industry.

Neatly spaced, low, modern, dispersed, office-plant-lab buildings rather than massive assembly structures, factories and storage areas mark the-tech industrial landscape. Planned business parks for high-tech start-ups have become part of regional and local development schemes.

High-tech industries which are regionally concentrated, self-sustained and highly specialised are called technopolies. The Silicon Valley near San Francisco and Silicon Forest near Seattle are examples of technopolies.

Manufacturing contributes significantly to the world economy. Iron and steel, textiles, automobiles, petrochemicals and electronics are some of the world's most important manufacturing industries.

Which one of the following is not true about High-Tech industry?

1. High-Tech is latest manufacturing Industry
2. It is intensive research and development unit
3. It is traditionally located close to the raw materials
4. Absence of massive statements, factories, storage etc.

**Options :**

485584133021. 1  
485584133022. 2  
485584133023. 3  
485584133024. 4

**Question Number : 192 Question Id : 48558433257 Question Type : MCQ Option Shuffling : No Is Question Mandatory : No Calculator : None Response Time : N.A Think Time : N.A Minimum Instruction Time : 0**

**Correct Marks : 5 Wrong Marks : 1**

**Question Key Details :**



Key	Value
Comprehension	Comp1

Read the passage and answer 5 questions that follow:

High technology, or simply high-tech, is the latest generation of manufacturing activities. It is best understood as the application of intensive research and development (R and D) efforts leading to the manufacture of products of an advanced scientific and engineering character. Professional (white collar) workers make up a large share of the total workforce. These highly skilled specialists greatly outnumber the actual production (blue collar) workers. Robotics on the assembly line, computer-aided design (CAD) and manufacturing, electronic controls of smelting and refining processes, and the constant development of new chemical and pharmaceutical products are notable examples of a high-tech industry.

Neatly spaced, low, modern, dispersed, office-plant-lab buildings rather than massive assembly structures, factories and storage areas mark the-tech industrial landscape. Planned business parks for high-tech start-ups have become part of regional and local development schemes.

High-tech industries which are regionally centred, self-sustained and highly specialised are called technopolies. The Silicon Valley near San Francisco and Silicon Forest near Seattle are examples of technopolies.

Manufacturing contributes significantly to the world economy. Iron and steel, textiles, automobiles, petrochemicals and electronics are some of the world's most important manufacturing industries.

Which one of the following are considered white collar workers?

1. Skilled specialist
2. Engineers
3. Farmers
4. Skilled workers

**Options :**

- 485584133025. 1
- 485584133026. 2
- 485584133027. 3
- 485584133028. 4

**Question Number : 193 Question Id : 48558433258 Question Type : MCQ Option Shuffling : No Is Question Mandatory : No Calculator : None Response Time : N.A Think Time : N.A Minimum Instruction Time : 0**

**Correct Marks : 5 Wrong Marks : 1**

**Question Key Details :**

Key	Value
Comprehension	Comp1

Read the passage and answer 5 questions that follow:

High technology, or simply high-tech, is the latest generation of manufacturing activities. It is best understood as the application of intensive research and development (R and D) efforts leading to the manufacture of products of an advanced scientific and engineering character. Professional (white collar) workers make up a large share of the total workforce. These highly skilled specialists greatly outnumber the actual production (blue collar) workers. Robotics on the assembly line, computer-aided design (CAD) and manufacturing, electronic controls of smelting and refining processes, and the constant development of new chemical and pharmaceutical products are notable examples of a high-tech industry.

Neatly spaced, low, modern, dispersed, office-plant-lab buildings rather than massive assembly structures, factories and storage areas mark the-tech industrial landscape. Planned business parks for high-tech start-ups have become part of regional and local development schemes.

High-tech industries which are regionally concentrated, self-sustained and highly specialised are called technopolies. The Silicon Valley near San Francisco and Silicon Forest near Seattle are examples of technopolies.

Manufacturing contributes significantly to the world economy. Iron and steel, textiles, automobiles, petrochemicals and electronics are some of the world's most important manufacturing industries.

Which of the following are an example of high-technology industry?

1. Textile production
2. Robotics
3. CAD
4. Pharmaceutical

**Options :**

- 485584133029. 1
- 485584133030. 2
- 485584133031. 3
- 485584133032. 4

**Question Number : 194 Question Id : 48558433259 Question Type : MCQ Option Shuffling : No Is Question Mandatory : No Calculator : None Response Time : N.A Think Time : N.A Minimum Instruction Time : 0**

**Correct Marks : 5 Wrong Marks : 1**

**Question Key Details :**

Key	Value
Comprehension	Comp1

Read the passage and answer 5 questions that follow:

High technology, or simply high-tech, is the latest generation of manufacturing activities. It is best understood as the application of intensive research and development (R and D) efforts leading to the manufacture of products of an advanced scientific and engineering character. Professional (white collar) workers make up a large share of the total workforce. These highly skilled specialists greatly outnumber the actual production (blue collar) workers. Robotics on the assembly line, computer-aided design (CAD) and manufacturing, electronic controls of smelting and refining processes, and the constant development of new chemical and pharmaceutical products are notable examples of a high-tech industry.

Neatly spaced, low, modern, dispersed, office-plant-lab buildings rather than massive assembly structures, factories and storage areas mark the-tech industrial landscape. Planned business parks for high-tech start-ups have become part of regional and local development schemes.

High-tech industries which are regionally concentrated, self-sustained and highly specialised are called technopolies. The Silicon Valley near San Francisco and Silicon Forest near Seattle are examples of technopolies.

Manufacturing contributes significantly to the world economy. Iron and steel, textiles, automobiles, petrochemicals and electronics are some of the world's most important manufacturing industries.

Which of the following term is used for the usually concentrated, self-sustained and specialised industry?

1. Iron & steel Industry
2. Textile industry
3. Automobile industry
4. Technopolies

**Options :**

- 485584133033. 1
- 485584133034. 2
- 485584133035. 3
- 485584133036. 4

**Question Number : 195 Question Id : 48558433260 Question Type : MCQ Option Shuffling : No Is Question Mandatory : No Calculator : None Response Time : N.A Think Time : N.A Minimum Instruction Time : 0**

**Correct Marks : 5 Wrong Marks : 1**

**Question Key Details :**

Key	Value
Comprehension	Comp1

Read the passage and answer 5 questions that follow:

High technology, or simply high-tech, is the latest generation of manufacturing activities. It is best understood as the application of intensive research and development (R and D) efforts leading to the manufacture of products of an advanced scientific and engineering character. Professional (white collar) workers make up a large share of the total workforce. These highly skilled specialists greatly outnumber the actual production (blue collar) workers. Robotics on the assembly line, computer-aided design (CAD) and manufacturing, electronic controls of smelting and refining processes, and the constant development of new chemical and pharmaceutical products are notable examples of a high-tech industry.

Neatly spaced, low, modern, dispersed, office-plant-lab buildings rather than massive assembly structures, factories and storage areas mark the-tech industrial landscape. Planned business parks for high-tech start-ups have become part of regional and local development schemes.

High-tech industries which are regionally concentrated, self-sustained and highly specialised are called technopolies. The Silicon Valley near San Francisco and Silicon Forest near Seattle are examples of techonopolies.

Manufacturing contributes significantly to the world economy. Iron and steel, textiles, automobiles, petrochemicals and electronics are some of the world's most important manufacturing industries.

Which of the following workers are greatly affected by High-Tech Industry?

1. White collar workers
2. Blue collar workers
3. Red collar workers
4. Grey collar workers

**Options :**

- 485584133037. 1
- 485584133038. 2
- 485584133039. 3
- 485584133040. 4

**Sub-Section Number :** 3  
**Sub-Section Id :** 4855842427  
**Question Shuffling Allowed :** No  
**Is Section Default? :** null

**Question Number : 196 Question Id : 48558433261 Question Type : MCQ Option Shuffling : No Is Question Mandatory : No Calculator : None Response Time : N.A Think Time : N.A Minimum Instruction Time : 0**

**Correct Marks : 5 Wrong Marks : 1**

**Question Key Details :**

Key	Value
Comprehension	Comp2

Read the passage and answer 5 questions that follow:

Watershed management basically refers to efficient management and conservation of surface and groundwater resources. It involves prevention of runoff and shortage and recharge of groundwater through various methods like percolation tanks. Recharge wells. Etc. however. In broad sense watershed management includes conservation. Regeneration and judicious use of all resources- natural (like land water plants and animals) and human with in a watershed. Watershed management aims at bringing about balance between natural resources on the one hand and society on the other. The success of watershed development largely depends upon community participation.

The Central and State Government have initiated many watershed development and management programmes in the country. some of these are being implemented by non-government organisations also. Haryali is a watershed development project sponsored by the Central Government which aims at enabling the rural populations to conserve water for drinking, irrigation, fisheries and afforestation. The Project is being executed by Gram Panchayats with people's participation. Neeru-Meeru (water and you) programme (in Andhra Pradesh) and Arvary Pani Sansad (in Alwar Rajasthan) have taken up constructions of various water-harvesting structures such as percolation tanks. Dug out ponds (Johand). Check dams. etc... through people's participation. Tamil Nadu has made water harvesting structures in the houses compulsory. No building can be constructed without making structures for water harvesting.

watershed development projects in some areas have been successful in rejuvenating environment and economy. However. There are only a few success stories. In majority of cases. The programme is still in its nascent stage. There is a need to generate awareness regarding benefits of watershed development and management among people in the country, and through this integrated water resource management approach water availability can be ensured on sustainable basis.

What is watershed?

1. It is efficient management and conservation of surface and groundwater resources.
2. It is a system of equitable distribution of water in an area.
3. It is a method of storing the canal water.
4. It is harvesting of natural streams.

**Options :**

- 485584133041. 1
- 485584133042. 2
- 485584133043. 3
- 485584133044. 4

**Question Number : 197 Question Id : 48558433262 Question Type : MCQ Option Shuffling : No Is Question Mandatory : No Calculator : None Response Time : N.A Think Time : N.A Minimum Instruction Time : 0**

**Correct Marks : 5 Wrong Marks : 1**

**Question Key Details :**

Key	Value
Comprehension	Comp2

Read the passage and answer 5 questions that follow:

Watershed management basically refers to efficient management and conservation of surface and groundwater resources. It involves prevention of runoff and shortage and recharge of groundwater through various methods like percolation tanks. Recharge wells. Etc. however. In broad sense watershed management includes conservation. Regeneration and judicious use of all resources- natural (like land water plants and animals) and human with in a watershed. Watershed management aims at bringing about balance between natural resources on the one hand and society on the other. The success of watershed development largely depends upon community participation.

The Central and State Government have initiated many watershed development and management programmes in the country. some of these are being implemented by non-government organisations also. Haryali is a watershed development project sponsored by the Central Government which aims at enabling the rural populations to conserve water for drinking, irrigation, fisheries and afforestation. The Project is being executed by Gram Panchayats with people's participation. Neeru-Meeru (water and you) programme (in Andhra Pradesh) and Arvary Pani Sansad (in Alwar Rajasthan) have taken up constructions of various water-harvesting structures such as percolation tanks. Dug out ponds (Johand). Check dams. etc... through people's participation. Tamil Nadu has made water harvesting structures in the houses compulsory. No building can be constructed without making structures for water harvesting.

watershed development projects in some areas have been successful in rejuvenating environment and economy. However. There are only a few success stories. In majority of cases. The programme is still in its nascent stage. There is a need to generate awareness regarding benefits of watershed development and management among people in the country, and through this integrated water resource management approach water availability can be ensured on sustainable basis.

Out of which one is the success story of watershed management in India?

1. Ahmednagar, Maharashtra
2. Gandhi Nagar, Gujarat
3. Alwar, Rajasthan
4. Andhra Pradesh

**Options :**

485584133045. 1  
485584133046. 2  
485584133047. 3  
485584133048. 4

**Question Number : 198 Question Id : 48558433263 Question Type : MCQ Option Shuffling : No Is Question Mandatory : No Calculator : None Response Time : N.A Think Time : N.A Minimum Instruction Time : 0**

**Correct Marks : 5 Wrong Marks : 1**

**Question Key Details :**

Key	Value
Comprehension	Comp2

Read the passage and answer 5 questions that follow:

Watershed management basically refers to efficient management and conservation of surface and groundwater resources. It involves prevention of runoff and shortage and recharge of groundwater through various methods like percolation tanks. Recharge wells. Etc. however. In broad sense watershed management includes conservation. Regeneration and judicious use of all resources- natural (like land water plants and animals) and human with in a watershed. Watershed management aims at bringing about balance between natural resources on the one hand and society on the other. The success of watershed development largely depends upon community participation.

The Central and State Government have initiated many watershed development and management programmes in the country. some of these are being implemented by non-government organisations also. Haryali is a watershed development project sponsored by the Central Government which aims at enabling the rural populations to conserve water for drinking, irrigation, fisheries and afforestation. The Project is being executed by Gram Panchayats with people's participation. Neeru-Meeru (water and you) programme (in Andhra Pradesh) and Arvary Pani Sansad (in Alwar Rajasthan) have taken up constructions of various water-harvesting structures such as percolation tanks. Dug out ponds (Johand). Check dams. etc... through people's participation. Tamil Nadu has made water harvesting structures in the houses compulsory. No building can be constructed without making structures for water harvesting.

watershed development projects in some areas have been successful in rejuvenating environment and economy. However. There are only a few success stories. In majority of cases. The programme is still in its nascent stage. There is a need to generate awareness regarding benefits of watershed development and management among people in the country, and through this integrated water resource management approach water availability can be ensured on sustainable basis.

Watershed Management largely depends upon the \_\_\_\_\_ .

1. Central and state Government
2. Community Participation
3. Management Programs
4. Development Projects

**Options :**

- 485584133049. 1
- 485584133050. 2
- 485584133051. 3
- 485584133052. 4

**Question Number : 199 Question Id : 48558433264 Question Type : MCQ Option Shuffling : No Is Question Mandatory : No Calculator : None Response Time : N.A Think Time : N.A Minimum Instruction Time : 0**

**Correct Marks : 5 Wrong Marks : 1**

**Question Key Details :**

Key	Value
Comprehension	Comp2

Read the passage and answer 5 questions that follow:

Watershed management basically refers to efficient management and conservation of surface and groundwater resources. It involves prevention of runoff and shortage and recharge of groundwater through various methods like percolation tanks. Recharge wells. Etc. however. In broad sense watershed management includes conservation. Regeneration and judicious use of all resources- natural (like land water plants and animals) and human with in a watershed. Watershed management aims at bringing about balance between natural resources on the one hand and society on the other. The success of watershed development largely depends upon community participation.

The Central and State Government have initiated many watershed development and management programmes in the country. some of these are being implemented by non-government organisations also. Haryali is a watershed development project sponsored by the Central Government which aims at enabling the rural populations to conserve water for drinking, irrigation, fisheries and afforestation. The Project is being executed by Gram Panchayats with people's participation. Neeru-Meeru (water and you) programme (in Andhra Pradesh) and Arvary Pani Sansad (in Alwar Rajasthan) have taken up constructions of various water-harvesting structures such as percolation tanks. Dug out ponds (Johand). Check dams. etc... through people's participation. Tamil Nadu has made water harvesting structures in the houses compulsory. No building can be constructed without making structures for water harvesting.

watershed development projects in some areas have been successful in rejuvenating environment and economy. However. There are only a few success stories. In majority of cases. The programme is still in its nascent stage. There is a need to generate awareness regarding benefits of watershed development and management among people in the country, and through this integrated water resource management approach water availability can be ensured on sustainable basis.

Which watershed development project is Sponsored by Central Government?

1. Arvary Pani Sansad
2. Compulsory water harvesting structures in all houses
3. Neeru-Meeru
4. Haryali

**Options :**

- 485584133053. 1
- 485584133054. 2
- 485584133055. 3
- 485584133056. 4

**Question Number : 200 Question Id : 48558433265 Question Type : MCQ Option Shuffling : No Is Question Mandatory : No Calculator : None Response Time : N.A Think Time : N.A Minimum Instruction Time : 0**

**Correct Marks : 5 Wrong Marks : 1**

**Question Key Details :**

Key	Value
Comprehension	Comp2



Read the passage and answer 5 questions that follow:

Watershed management basically refers to efficient management and conservation of surface and groundwater resources. It involves prevention of runoff and shortage and recharge of groundwater through various methods like percolation tanks. Recharge wells. Etc. however. In broad sense watershed management includes conservation. Regeneration and judicious use of all resources- natural (like land water plants and animals) and human with in a watershed. Watershed management aims at bringing about balance between natural resources on the one hand and society on the other. The success of watershed development largely depends upon community participation.

The Central and State Government have initiated many watershed development and management programmes in the country. some of these are being implemented by non-government organisations also. Haryali is a watershed development project sponsored by the Central Government which aims at enabling the rural populations to conserve water for drinking, irrigation, fisheries and afforestation. The Project is being executed by Gram Panchayats with people's participation. Neeru-Meeru (water and you) programme (in Andhra Pradesh) and Arvary Pani Sansad (in Alwar Rajasthan) have taken up constructions of various water-harvesting structures such as percolation tanks. Dug out ponds (Johand). Check dams. etc... through people's participation. Tamil Nadu has made water harvesting structures in the houses compulsory. No building can be constructed without making structures for water harvesting.

watershed development projects in some areas have been successful in rejuvenating environment and economy. However. There are only a few success stories. In majority of cases. The programme is still in its nascent stage. There is a need to generate awareness regarding benefits of watershed development and management among people in the country, and through this integrated water resource management approach water availability can be ensured on sustainable basis.

Which of the following watershed management programme was started in Rajasthan?

1. Arvary Pani Sansad
2. Neeru-Meeru
3. Haryali
4. Water harvesting

**Options :**

485584133057. 1  
485584133058. 2  
485584133059. 3  
485584133060. 4

## History

<b>Group Number :</b>	8
<b>Group Id :</b>	485584746
<b>Group Maximum Duration :</b>	45
<b>Group Minimum Duration :</b>	45
<b>Show Attended Group? :</b>	No
<b>Edit Attended Group? :</b>	No
<b>Break time :</b>	0
<b>Group Marks :</b>	200
<b>Is this Group for Examiner? :</b>	No

Examiner permission :  
Show Progress Bar? :

Cant View  
No

## History

Section Id : 485584860  
Section Number : 1  
Section type : Online  
Mandatory or Optional : Mandatory  
Number of Questions : 50  
Number of Questions to be attempted : 40  
Section Marks : 200  
Enable Mark as Answered Mark for Review and Clear Response : Yes  
Maximum Instruction Time : 0  
Sub-Section Number : 1  
Sub-Section Id : 4855842428  
Question Shuffling Allowed : Yes  
Is Section Default? : null

Question Number : 201 Question Id : 48558433316 Question Type : MCQ Option Shuffling : No Is Question Mandatory :  
No Calculator : None Response Time : N.A Think Time : N.A Minimum Instruction Time : 0  
Correct Marks : 5 Wrong Marks : 1

Question Key Details :

Key	Value
Comprehension	MCQ

Who amongst the following was the engraver of Prabhavati Gupta's inscription?

1. Banabhatta
2. Chakradasa
3. Nagapiya
4. Sovanika

Options :

485584133261. 1  
485584133262. 2  
485584133263. 3  
485584133264. 4

Question Number : 202 Question Id : 48558433317 Question Type : MCQ Option Shuffling : No Is Question Mandatory :  
No Calculator : None Response Time : N.A Think Time : N.A Minimum Instruction Time : 0  
Correct Marks : 5 Wrong Marks : 1

Question Key Details :

Key	Value
Comprehension	MCQ

How many 'Mahajanapadas' are there in total?

1. Fourteen
2. Six
3. Sixteen
4. Twelve

**Options :**

485584133265. 1  
485584133266. 2  
485584133267. 3  
485584133268. 4

**Question Number : 203 Question Id : 48558433318 Question Type : MCQ Option Shuffling : No Is Question Mandatory : No Calculator : None Response Time : N.A Think Time : N.A Minimum Instruction Time : 0**

**Correct Marks : 5 Wrong Marks : 1**

**Question Key Details :**

Key	Value
Comprehension	MCQ

The Sangam texts mention categories of people living in the villages. Identify the categories:

- A. Masattuvan
- B. Setthis
- C. Uzhavar
- D. Adimai
- E. Vellalar

Choose the **correct** answer from the options given below:

1. A, B, C only
2. B, C, D only
3. C, D, E only
4. A, C, E only

**Options :**

485584133269. 1  
485584133270. 2  
485584133271. 3  
485584133272. 4

**Question Number : 204 Question Id : 48558433319 Question Type : MCQ Option Shuffling : No Is Question Mandatory : No Calculator : None Response Time : N.A Think Time : N.A Minimum Instruction Time : 0**

**Correct Marks : 5 Wrong Marks : 1**

**Question Key Details :**

Key	Value
Comprehension	MCQ

Identify the writer of the play titled 'Mrichchhakatika'?

1. Vasistha
2. Shudraka
3. Gotama
4. Panini

**Options :**

485584133273. 1  
485584133274. 2  
485584133275. 3  
485584133276. 4

**Question Number : 205 Question Id : 48558433320 Question Type : MCQ Option Shuffling : No Is Question Mandatory : No Calculator : None Response Time : N.A Think Time : N.A Minimum Instruction Time : 0**

**Correct Marks : 5 Wrong Marks : 1**

**Question Key Details :**

Key	Value
Comprehension	MCQ

Abdur Razzaq Samarqandi gave important description of which city?

1. Delhi
2. Vijayanagara
3. Sumtra
4. Magadha

**Options :**

485584133277. 1  
485584133278. 2  
485584133279. 3  
485584133280. 4

**Question Number : 206 Question Id : 48558433321 Question Type : MCQ Option Shuffling : No Is Question Mandatory : No Calculator : None Response Time : N.A Think Time : N.A Minimum Instruction Time : 0**

**Correct Marks : 5 Wrong Marks : 1**

**Question Key Details :**

Key	Value
Comprehension	MCQ

From Malabar he went to Maldives, where he stayed for 10 months as qazi, but eventually decided to go to Sri Lanka. He took a ship to Sumatra and from there another ship to Chinese town Zaytun. He travelled extensively in China. Who was he?

1. Ibn Battuta
2. Al-Biruni
3. Bernier
4. Hiuen-Tsang

**Options :**

485584133281. 1  
485584133282. 2  
485584133283. 3  
485584133284. 4

**Question Number : 207 Question Id : 48558433322 Question Type : MCQ Option Shuffling : No Is Question Mandatory : No Calculator : None Response Time : N.A Think Time : N.A Minimum Instruction Time : 0**

**Correct Marks : 5 Wrong Marks : 1**

**Question Key Details :**

Key	Value
Comprehension	MCQ

Mirabai, the best-known women poet of the bhakti tradition was Rajput princess from:-

1. Mewar
2. Marwar
3. Gujarat
4. Delhi

**Options :**

485584133285. 1  
485584133286. 2  
485584133287. 3  
485584133288. 4

**Question Number : 208 Question Id : 48558433323 Question Type : MCQ Option Shuffling : No Is Question Mandatory : No Calculator : None Response Time : N.A Think Time : N.A Minimum Instruction Time : 0**

**Correct Marks : 5 Wrong Marks : 1**

**Question Key Details :**

Key	Value
Comprehension	MCQ

Which among the following religious teachers are associated with Punjab?

- A. Tukaram
- B. Ganj Bakhsh
- C. Miyan Mir
- D. Fariduddin Ganj-i-Shakar
- E. Raidas

Choose the **correct** answer from the options given below:

- 1. A, B, C only
- 2. B, C, D only
- 3. C, D, E only
- 4. A, C, E only

**Options :**

- 485584133289. 1
- 485584133290. 2
- 485584133291. 3
- 485584133292. 4

**Question Number : 209 Question Id : 48558433324 Question Type : MCQ Option Shuffling : No Is Question Mandatory : No Calculator : None Response Time : N.A Think Time : N.A Minimum Instruction Time : 0**

**Correct Marks : 5 Wrong Marks : 1**

**Question Key Details :**

Key	Value
Comprehension	MCQ

Match List I with List II:-

LIST I (Terms)		LIST II (Meaning)	
A.	Zimmi	I.	Tomb Shrine
B.	Jizya	II.	Protected
C.	Dargah	III.	Pilgrimage
D.	Ziyarat	IV.	A religious tax paid by Hindus

Choose the **correct** answer from the options given below:

- 1. A-I, B-II, C-IV, D-III
- 2. A-II, B-IV, C-III, D-I
- 3. A-IV, B-III, C-II, D-I
- 4. A-II, B-IV, C-I, D-III

**Options :**

- 485584133293. 1
- 485584133294. 2
- 485584133295. 3
- 485584133296. 4

**Question Number : 210 Question Id : 48558433325 Question Type : MCQ Option Shuffling : No Is Question Mandatory : No Calculator : None Response Time : N.A Think Time : N.A Minimum Instruction Time : 0 Correct Marks : 5 Wrong Marks : 1**

**Question Key Details :**

Key	Value
Comprehension	MCQ

Which of the following is considered as one of the most spectacular temple in the Vijayanagara Empire?

1. Vitthala Temple
2. Virupaksha Temple
3. Hazara Rama Temple
4. Brihadishvara Temple

**Options :**

- 485584133297. 1
- 485584133298. 2
- 485584133299. 3
- 485584133300. 4

**Question Number : 211 Question Id : 48558433326 Question Type : MCQ Option Shuffling : No Is Question Mandatory : No Calculator : None Response Time : N.A Think Time : N.A Minimum Instruction Time : 0 Correct Marks : 5 Wrong Marks : 1**

**Question Key Details :**

Key	Value
Comprehension	MCQ

In which year did Krishnadeva Raya defeat the sultan of Bijapur?

1. 1529
2. 1520
3. 1514
4. 1512

**Options :**

- 485584133301. 1
- 485584133302. 2
- 485584133303. 3
- 485584133304. 4

**Question Number : 212 Question Id : 48558433327 Question Type : MCQ Option Shuffling : No Is Question Mandatory : No Calculator : None Response Time : N.A Think Time : N.A Minimum Instruction Time : 0 Correct Marks : 5 Wrong Marks : 1**

**Question Key Details :**

Key	Value
Comprehension	MCQ

Arrange the establishment of the following kingdoms in a chronological order:

- A. Emergence of the Sultanates of Ahmadnagar, Bijapur and Berar
- B. Establishment of Bahmani Kingdom.
- C. Establishment of Vijayanagara Empire.
- D. Establishment of the Sultanate of Golconda.
- E. Conquest of Goa by the Portuguese

Choose the **correct** answer from the options given below:

- 1. D, E, A, B, C
- 2. B, C, D, E, A
- 3. A, B, C, D, E
- 4. C, B, A, E, D

**Options :**

- 485584133305. 1
- 485584133306. 2
- 485584133307. 3
- 485584133308. 4

**Question Number : 213 Question Id : 48558433328 Question Type : MCQ Option Shuffling : No Is Question Mandatory : No Calculator : None Response Time : N.A Think Time : N.A Minimum Instruction Time : 0**

**Correct Marks : 5 Wrong Marks : 1**

**Question Key Details :**

Key	Value
Comprehension	MCQ

From the statements given below, choose the **correct** ones about the fortifications and roads in Vijayanagara Empire.

- A. Paes, an ambassador from Persia, mentioned seven lines of forts.
- B. Razzaq said that cementing was used in the walls of the fort.
- C. There was no fortification around the agricultural fields.
- D. The fort was entered through well-guarded gates linking the city to the major road.
- E. The arch on the gateway led to the fortified settlement.

Choose the **correct** answer from the options given below:

- 1. E, A only
- 2. D, E only
- 3. C, D only
- 4. B, A only

**Options :**

- 485584133309. 1
- 485584133310. 2
- 485584133311. 3
- 485584133312. 4



**Question Number : 214 Question Id : 48558433329 Question Type : MCQ Option Shuffling : No Is Question Mandatory : No Calculator : None Response Time : N.A Think Time : N.A Minimum Instruction Time : 0**

**Correct Marks : 5 Wrong Marks : 1**

**Question Key Details :**

Key	Value
Comprehension	MCQ

Match List I with List II:-

LIST I (Foreign Traveler)		LIST II (Country)	
A.	Nicolo de Conti	I.	Russia
B.	Domingo Paes	II.	Persia
C.	Nikitin	III.	Italy
D.	Abdur Razzaq	IV.	Portugal

Choose the correct answer from the options given below:

1. A-III, B-IV, C-I, D-II
2. A-I, B-II, C-III, D-IV
3. A-IV, B-I, C-III, D-II
4. A-II, B-III, C-I, D-IV

**Options :**

- 485584133313. 1
- 485584133314. 2
- 485584133315. 3
- 485584133316. 4

**Question Number : 215 Question Id : 48558433330 Question Type : MCQ Option Shuffling : No Is Question Mandatory : No Calculator : None Response Time : N.A Think Time : N.A Minimum Instruction Time : 0**

**Correct Marks : 5 Wrong Marks : 1**

**Question Key Details :**

Key	Value
Comprehension	MCQ

Arrange these landmarks of the Mughal Empire in a chronological order.

- A. Reign of Akbar
- B. Reign of Humayun
- C. Reign of Shah Jahan
- D. Reign of Jahangir
- E. Reign of Aurangzeb

Choose the **correct** answer from the options given below:

- 1. A, B, C, D, E
- 2. B, A, D, C, E
- 3. E, D, B, C, A
- 4. B, C, A, D, E

**Options :**

- 485584133317. 1
- 485584133318. 2
- 485584133319. 3
- 485584133320. 4

**Question Number : 216 Question Id : 48558433331 Question Type : MCQ Option Shuffling : No Is Question Mandatory : No Calculator : None Response Time : N.A Think Time : N.A Minimum Instruction Time : 0**

**Correct Marks : 5 Wrong Marks : 1**

**Question Key Details :**

Key	Value
Comprehension	MCQ

In a painting titled "Jahangir's dream", the Mughal Emperor Jahangir is portrayed as embracing:-

- 1. Shah of Iraq
- 2. Abbasid Caliph
- 3. Shah of Iran
- 4. Safavid Shah Abbas

**Options :**

- 485584133321. 1
- 485584133322. 2
- 485584133323. 3
- 485584133324. 4

**Question Number : 217 Question Id : 48558433332 Question Type : MCQ Option Shuffling : No Is Question Mandatory : No Calculator : None Response Time : N.A Think Time : N.A Minimum Instruction Time : 0**

**Correct Marks : 5 Wrong Marks : 1**

**Question Key Details :**

Key	Value
Comprehension	MCQ

Akbar's quest for religious knowledge led to inter-faith debates in the Ibadat Khana at:-

1. Agra Fort
2. Red Fort of Shahjahanabad
3. Dargah of Nizamuddin Aulia
4. Fatehpur Sikri

**Options :**

485584133325. 1  
485584133326. 2  
485584133327. 3  
485584133328. 4

**Question Number : 218 Question Id : 48558433333 Question Type : MCQ Option Shuffling : No Is Question Mandatory : No Calculator : None Response Time : N.A Think Time : N.A Minimum Instruction Time : 0**

**Correct Marks : 5 Wrong Marks : 1**

**Question Key Details :**

Key	Value
Comprehension	MCQ

Match List I with List II:-

LIST I		LIST II	
A.	Gulbadan Begum	I.	Alamgir Nama
B.	Abu'l Fzal	II.	Humayun Nama
C.	Muhammad Kazim	III.	Akbar Nama
D.	Abdul Hamid Lahori	IV.	Badshah Nama

Choose the **correct** answer from the options given below:

1. A-III, B-II, C-I, D-IV
2. A-I, B-II, C-IV, D-III
3. A-II, B-III, C-I, D-IV
4. A-IV, B-III, C-II, D-I

**Options :**

485584133329. 1  
485584133330. 2  
485584133331. 3  
485584133332. 4

**Question Number : 219 Question Id : 48558433334 Question Type : MCQ Option Shuffling : No Is Question Mandatory : No Calculator : None Response Time : N.A Think Time : N.A Minimum Instruction Time : 0**

**Correct Marks : 5 Wrong Marks : 1**

**Question Key Details :**

Key	Value
Comprehension	MCQ

The areas under Ryotwari Settlements were surveyed after how many years?

1. 10 years
2. 20 years
3. 30 years
4. 40 years

**Options :**

485584133333. 1  
485584133334. 2  
485584133335. 3  
485584133336. 4

**Question Number : 220 Question Id : 48558433335 Question Type : MCQ Option Shuffling : No Is Question Mandatory : No Calculator : None Response Time : N.A Think Time : N.A Minimum Instruction Time : 0**

**Correct Marks : 5 Wrong Marks : 1**

**Question Key Details :**

Key	Value
Comprehension	MCQ

Where was first British colonial rule established in India?

1. Madras Presidency
2. Bombay Presidency
3. Bengal Subah
4. Mysore State

**Options :**

485584133337. 1  
485584133338. 2  
485584133339. 3  
485584133340. 4

**Question Number : 221 Question Id : 48558433336 Question Type : MCQ Option Shuffling : No Is Question Mandatory : No Calculator : None Response Time : N.A Think Time : N.A Minimum Instruction Time : 0**

**Correct Marks : 5 Wrong Marks : 1**

**Question Key Details :**

Key	Value
Comprehension	MCQ

The revenue system that was introduced in Bombay Deccan came to be known as:-

1. Permanent Settlement
2. Ryotwari Settlement
3. Mahalwari Settlement
4. Taluqudari Settlement

**Options :**

485584133341. 1  
485584133342. 2  
485584133343. 3  
485584133344. 4

**Question Number : 222 Question Id : 48558433337 Question Type : MCQ Option Shuffling : No Is Question Mandatory : No Calculator : None Response Time : N.A Think Time : N.A Minimum Instruction Time : 0**

**Correct Marks : 5 Wrong Marks : 1**

**Question Key Details :**

Key	Value
Comprehension	MCQ

Which of the following are **correct** about Deccan riots?

- A. The movement began at Supa, a village in Poona.
- B. Supa was an inaccessible forest area with no markets.
- C. On 12 may 1875, ryots attacked the shopkeepers.
- D. Ryots set fire to the houses of British and protected the houses of Sahukars and moneylenders.
- E. Account books were not destroyed by the ryots rather preserved by them.

Choose the **correct** answer from the options given below:

1. D and E only
2. A and B only
3. A and C only
4. B and D only

**Options :**

485584133345. 1  
485584133346. 2  
485584133347. 3  
485584133348. 4

**Question Number : 223 Question Id : 48558433338 Question Type : MCQ Option Shuffling : No Is Question Mandatory : No Calculator : None Response Time : N.A Think Time : N.A Minimum Instruction Time : 0**

**Correct Marks : 5 Wrong Marks : 1**

**Question Key Details :**

Key	Value
Comprehension	MCQ

Match List I with List II

LIST I		LIST II	
A.	British takeover of Deccan	I.	1757
B.	The British become rulers of Bengal	II.	1911
C.	Plague spreads to major cities	III.	1818
D.	Transfer of capital from Calcutta to Delhi	IV.	1896

Choose the **correct** answer from the options given below:

1. A-IV, B-III, C-II, D-I
2. A-I, B-II, C-III, D-IV
3. A-II, B-IV, C-I, D-III
4. A-III, B-I, C-IV, D-III

**Options :**

485584133349. 1  
485584133350. 2  
485584133351. 3  
485584133352. 4

**Question Number : 224 Question Id : 48558433339 Question Type : MCQ Option Shuffling : No Is Question Mandatory : No Calculator : None Response Time : N.A Think Time : N.A Minimum Instruction Time : 0**

**Correct Marks : 5 Wrong Marks : 1**

**Question Key Details :**

Key	Value
Comprehension	MCQ

When was Awadh formally annexed by the British?

1. 1801
2. 1842
3. 1851
4. 1856

**Options :**

485584133353. 1  
485584133354. 2  
485584133355. 3  
485584133356. 4

**Question Number : 225 Question Id : 48558433340 Question Type : MCQ Option Shuffling : No Is Question Mandatory : No Calculator : None Response Time : N.A Think Time : N.A Minimum Instruction Time : 0**

**Correct Marks : 5 Wrong Marks : 1**

**Question Key Details :**

Key	Value
Comprehension	MCQ

Who said, "A cherry that will drop into our mouth one day" in the context of Awadh?

1. Lord Dalhousie
2. Lord Wellesley
3. Lord Canning
4. Lord Curzon

**Options :**

485584133357. 1  
485584133358. 2  
485584133359. 3  
485584133360. 4

**Question Number : 226 Question Id : 48558433341 Question Type : MCQ Option Shuffling : No Is Question Mandatory : No Calculator : None Response Time : N.A Think Time : N.A Minimum Instruction Time : 0**

**Correct Marks : 5 Wrong Marks : 1**

**Question Key Details :**

Key	Value
Comprehension	MCQ

Find out the name of the painter who painted "In Memoriam" From the option given below:

1. Thomas Jones Barker
2. Joseph Noel Paton
3. Miss Wheeler
4. Henry Lawrence

**Options :**

485584133361. 1  
485584133362. 2  
485584133363. 3  
485584133364. 4

**Question Number : 227 Question Id : 48558433342 Question Type : MCQ Option Shuffling : No Is Question Mandatory : No Calculator : None Response Time : N.A Think Time : N.A Minimum Instruction Time : 0**

**Correct Marks : 5 Wrong Marks : 1**

**Question Key Details :**

Key	Value
Comprehension	MCQ

Under the leadership of which Governor General the custom of Sati was legally abolished?

1. Lord Curzon
2. Lord William Bentinck
3. Lord Dalhousie
4. Lord Wellesley

**Options :**

485584133365. 1  
485584133366. 2  
485584133367. 3  
485584133368. 4

**Question Number : 228 Question Id : 48558433343 Question Type : MCQ Option Shuffling : No Is Question Mandatory : No Calculator : None Response Time : N.A Think Time : N.A Minimum Instruction Time : 0**

**Correct Marks : 5 Wrong Marks : 1**

**Question Key Details :**

Key	Value
Comprehension	MCQ

Arrange the following in chronological order according to their date of occurrence.

- A. Sepoy Mutiny in Meerut
- B. Summary settlement in Awadh
- C. Rising in Lucknow
- D. Rani of Jhansi killed in battle

Choose the **correct** answer from the options given below:

1. B, C, A, D
2. A, C, D, B
3. B, A, C, D
4. C, B, A, D

**Options :**

485584133369. 1  
485584133370. 2  
485584133371. 3  
485584133372. 4

**Question Number : 229 Question Id : 48558433344 Question Type : MCQ Option Shuffling : No Is Question Mandatory : No Calculator : None Response Time : N.A Think Time : N.A Minimum Instruction Time : 0**

**Correct Marks : 5 Wrong Marks : 1**

**Question Key Details :**

Key	Value
Comprehension	MCQ



Arrange the following European trading companies in the chronological order in context of their settlement in India.

- A. Dutch
- B. British
- C. French
- D. Portuguese

Choose the **correct** answer from the options given below:

- 1. A, B, C, D
- 2. D, A, C, B
- 3. D, A, B, C
- 4. C, A, B, D

**Options :**

- 485584133373. 1
- 485584133374. 2
- 485584133375. 3
- 485584133376. 4

**Question Number : 230 Question Id : 48558433345 Question Type : MCQ Option Shuffling : No Is Question Mandatory : No Calculator : None Response Time : N.A Think Time : N.A Minimum Instruction Time : 0**

**Correct Marks : 5 Wrong Marks : 1**

**Question Key Details :**

Key	Value
Comprehension	MCQ

Which of the following statement is **incorrect**?

- 1. Lal, Bal and Pal were the leaders of Swadeshi Movement.
- 2. Extremist leaders are known for their moderate politics.
- 3. Moderates preferred gradual and persuasive approach.
- 4. Gopal Krishna Gokhale was a Moderate leader.

**Options :**

- 485584133377. 1
- 485584133378. 2
- 485584133379. 3
- 485584133380. 4

**Question Number : 231 Question Id : 48558433346 Question Type : MCQ Option Shuffling : No Is Question Mandatory : No Calculator : None Response Time : N.A Think Time : N.A Minimum Instruction Time : 0**

**Correct Marks : 5 Wrong Marks : 1**

**Question Key Details :**

Key	Value
Comprehension	MCQ

Through 'Salt March', Gandhi took the national movement to every household. This tactical wisdom was to bring larger participation of \_\_\_\_\_ in the freedom struggle.

1. Dalits
2. Menial workers
3. Peasants
4. Women

**Options :**

- 485584133381. 1
- 485584133382. 2
- 485584133383. 3
- 485584133384. 4

**Question Number : 232 Question Id : 48558433347 Question Type : MCQ Option Shuffling : No Is Question Mandatory : No Calculator : None Response Time : N.A Think Time : N.A Minimum Instruction Time : 0**

**Correct Marks : 5 Wrong Marks : 1**

**Question Key Details :**

Key	Value
Comprehension	MCQ

In which year did Gandhi left British India for South Africa as a lawyer?

1. 1881
2. 1893
3. 1894
4. 1915

**Options :**

- 485584133385. 1
- 485584133386. 2
- 485584133387. 3
- 485584133388. 4

**Question Number : 233 Question Id : 48558433348 Question Type : MCQ Option Shuffling : No Is Question Mandatory : No Calculator : None Response Time : N.A Think Time : N.A Minimum Instruction Time : 0**

**Correct Marks : 5 Wrong Marks : 1**

**Question Key Details :**

Key	Value
Comprehension	MCQ

Due to which event the British instituted 'censorship of the press' and detention without trial. It was later known as the Rowlatt Act?

1. The Great Depression
2. World War I
3. World War II
4. Balkan Wars

**Options :**

485584133389. 1  
485584133390. 2  
485584133391. 3  
485584133392. 4

**Question Number : 234 Question Id : 48558433349 Question Type : MCQ Option Shuffling : No Is Question Mandatory : No Calculator : None Response Time : N.A Think Time : N.A Minimum Instruction Time : 0**

**Correct Marks : 5 Wrong Marks : 1**

**Question Key Details :**

Key	Value
Comprehension	MCQ

Match List I with List II

LIST I (Non-Cooperation Social Groups)		LIST II (Participation in Non-Cooperation)	
A.	The working class	I.	Refused to carry loads for colonial officers
B.	Hill tribes in northern Andhra	II.	Did not pay taxes
C.	Peasants in Kumaun	III.	Violated the forest laws
D.	Farmers in Awadh	IV.	Strike

Choose the correct answer from the options given below:

1. A-IV, B-III, C-I, D-II
2. A-I, B-III, C-II, D-IV
3. A-I, B-II, C-III, D-IV
4. A-IV, B-I, C-III, D-II

**Options :**

485584133393. 1  
485584133394. 2  
485584133395. 3  
485584133396. 4

**Question Number : 235 Question Id : 48558433350 Question Type : MCQ Option Shuffling : No Is Question Mandatory : No Calculator : None Response Time : N.A Think Time : N.A Minimum Instruction Time : 0**

**Correct Marks : 5 Wrong Marks : 1**

**Question Key Details :**

Key	Value
-----	-------

Arrange the following in a chronological order.

- A. Resolution at Lahore, demanding a measure of autonomy for the Muslim-majority areas.
- B. Violence breaks out between Hindus and Muslims in Calcutta.
- C. The name Pakistan is coined by a Punjabi Muslim student at Cambridge, Choudhary Rehmat Ali.
- D. The Muslim League declares "Direct Action" for winning Pakistan.
- E. Mohammad Iqbal speaks of the need for an autonomous North West Indian Muslim state.

Choose the **correct** answer from the options given below:

1. A, C, E, B, D
2. C, E, B, D, A
3. E, C, A, D, B
4. B, C, D, A, E

**Options :**

485584133397. 1
485584133398. 2
485584133399. 3
485584133400. 4

**Question Number : 236 Question Id : 48558433351 Question Type : MCQ Option Shuffling : No Is Question Mandatory : No Calculator : None Response Time : N.A Think Time : N.A Minimum Instruction Time : 0**

**Correct Marks : 5 Wrong Marks : 1**

**Question Key Details :**

Key	Value
Comprehension	MCQ

"The British element is gone, but they have left the mischief behind" Who said this against the separate electorates?

1. Jawaharlal Nehru
2. Vallabhbhai Patel
3. B. Pocker Bahadur
4. R. V. Dhulekar

**Options :**

485584133401. 1
485584133402. 2
485584133403. 3
485584133404. 4

**Question Number : 237 Question Id : 48558433352 Question Type : MCQ Option Shuffling : No Is Question Mandatory : No Calculator : None Response Time : N.A Think Time : N.A Minimum Instruction Time : 0**

**Correct Marks : 5 Wrong Marks : 1**

**Question Key Details :**

Key	Value
-----	-------

Comprehension	MCQ
---------------	-----

Which of the following language was proposed by Mahatma Gandhi as the national language as it could be spoken by the common people?

1. Arabic
2. Sanskrit
3. Hindustani
4. Persian

**Options :**

485584133405. 1  
485584133406. 2  
485584133407. 3  
485584133408. 4

**Question Number : 238 Question Id : 48558433353 Question Type : MCQ Option Shuffling : No Is Question Mandatory : No Calculator : None Response Time : N.A Think Time : N.A Minimum Instruction Time : 0**

**Correct Marks : 5 Wrong Marks : 1**

**Question Key Details :**

Key	Value
Comprehension	MCQ

Which articles provide the Fundamental Rights of "Cultural and Education Rights"

1. Articles 25-26
2. Articles 27-28
3. Articles 29-30
4. Articles 14-16

**Options :**

485584133409. 1  
485584133410. 2  
485584133411. 3  
485584133412. 4

**Question Number : 239 Question Id : 48558433354 Question Type : MCQ Option Shuffling : No Is Question Mandatory : No Calculator : None Response Time : N.A Think Time : N.A Minimum Instruction Time : 0**

**Correct Marks : 5 Wrong Marks : 1**

**Question Key Details :**

Key	Value
Comprehension	MCQ

Who said that separate electorate is a "Poison that has entered the body politics of our country"?

1. S. N. Mukherjee
2. Vallabhbhai Patel
3. Rajendra Prasad
4. Jawaharlal Nehru

**Options :**

485584133413. 1  
485584133414. 2  
485584133415. 3  
485584133416. 4

**Question Number : 240 Question Id : 48558433355 Question Type : MCQ Option Shuffling : No Is Question Mandatory : No Calculator : None Response Time : N.A Think Time : N.A Minimum Instruction Time : 0**

**Correct Marks : 5 Wrong Marks : 1**

**Question Key Details :**

Key	Value
Comprehension	MCQ

Arrange the following in a chronological order.

- A. Labour Government comes to Power in Britain.
- B. Cabinet Mission's Announcement.
- C. Muslim League announces Direct Action Day.
- D. General Election of India.

Choose the **correct** answer from the options given below:

1. A, B, C, D
2. A, D, B, C
3. C, A, B, D
4. B, A, C, D

**Options :**

485584133417. 1  
485584133418. 2  
485584133419. 3  
485584133420. 4

**Sub-Section Number :** 2  
**Sub-Section Id :** 4855842429  
**Question Shuffling Allowed :** No  
**Is Section Default? :** null

**Question Number : 241 Question Id : 48558433356 Question Type : MCQ Option Shuffling : No Is Question Mandatory : No Calculator : None Response Time : N.A Think Time : N.A Minimum Instruction Time : 0**

**Correct Marks : 5 Wrong Marks : 1**

**Question Key Details :**

Key	Value
Comprehension	Comp1

**Read the passage and answer the questions:**

Mesopotamian texts datable to the third millennium BCE refer to copper coming from a region called Magan. Interestingly enough copper found at Mesopotamian sites also contains traces of nickel. Other archaeological finds suggestive of long-distance contacts include Harappan seals, weights, dice and beads. Mesopotamian texts mention contact with regions named Dilmun, Magan and Meluhha. They mention the products from Meluhha: Carnelian, lapis lazuli, copper, gold, and varieties of wood. A Mesopotamian myth says of Meluhha: "May your bird be the haja-bird, may its call be heard in the royal palace."

"Meluhha" in the Mesopotamian texts refers to:-

1. Oman
2. Bahrain
3. Iran
4. Harappa

**Options :**

485584133421. 1  
485584133422. 2  
485584133423. 3  
485584133424. 4

**Question Number : 242 Question Id : 48558433357 Question Type : MCQ Option Shuffling : No Is Question Mandatory : No Calculator : None Response Time : N.A Think Time : N.A Minimum Instruction Time : 0**

**Correct Marks : 5 Wrong Marks : 1**

**Question Key Details :**

Key	Value
Comprehension	Comp1

**Read the passage and answer the questions:**

Mesopotamian texts datable to the third millennium BCE refer to copper coming from a region called Magan. Interestingly enough copper found at Mesopotamian sites also contains traces of nickel. Other archaeological finds suggestive of long-distance contacts include Harappan seals, weights, dice and beads. Mesopotamian texts mention contact with regions named Dilmun, Magan and Meluhha. They mention the products from Meluhha: Carnelian, lapis lazuli, copper, gold, and varieties of wood. A Mesopotamian myth says of Meluhha: "May your bird be the haja-bird, may its call be heard in the royal palace."

According to some archaeologists, the haja-bird mentioned in the Mesopotamian texts was:-

1. Peacock
2. Eagle
3. Koel
4. Sparrow

**Options :**

485584133425. 1  
485584133426. 2  
485584133427. 3  
485584133428. 4

**Question Number : 243 Question Id : 48558433358 Question Type : MCQ Option Shuffling : No Is Question Mandatory : No Calculator : None Response Time : N.A Think Time : N.A Minimum Instruction Time : 0**

**Correct Marks : 5 Wrong Marks : 1**

**Question Key Details :**

Key	Value
Comprehension	Comp1

**Read the passage and answer the questions:**

Mesopotamian texts datable to the third millennium BCE refer to copper coming from a region called Magan. Interestingly enough copper found at Mesopotamian sites also contains traces of nickel. Other archaeological finds suggestive of long-distance contacts include Harappan seals, weights, dice and beads. Mesopotamian texts mention contact with regions named Dilmun, Magan and Meluhha. They mention the products from Meluhha: Carnelian, lapis lazuli, copper, gold, and varieties of wood. A Mesopotamian myth says of Meluhha: "May your bird be the haja-bird, may its call be heard in the royal palace."

What was the Harappan seal made of?

1. Chert
2. Carnelion
3. Steatite
4. Lapis Lazuli

**Options :**

485584133429. 1  
485584133430. 2  
485584133431. 3  
485584133432. 4

**Question Number : 244 Question Id : 48558433359 Question Type : MCQ Option Shuffling : No Is Question Mandatory : No Calculator : None Response Time : N.A Think Time : N.A Minimum Instruction Time : 0**

**Correct Marks : 5 Wrong Marks : 1**

**Question Key Details :**

Key	Value
-----	-------



**Read the passage and answer the questions:**

Mesopotamian texts datable to the third millennium BCE refer to copper coming from a region called Magan. Interestingly enough copper found at Mesopotamian sites also contains traces of nickel. Other archaeological finds suggestive of long-distance contacts include Harappan seals, weights, dice and beads. Mesopotamian texts mention contact with regions named Dilmun, Magan and Meluhha. They mention the products from Meluhha: Carnelian, lapis lazuli, copper, gold, and varieties of wood. A Mesopotamian myth says of Meluhha: "May your bird be the aja-bird, may its call be heard in the royal palace."

Specialised drills have been found at which of the following Harappan sites?

- A. Nageshwar
- B. Dholavira
- C. Lothal
- D. Balakot
- E. Chanhudaro

Choose the **correct** answer from the options given below:

- 1. C, D, E only
- 2. B, C, E only
- 3. A, B, D only
- 4. A, B, C only

**Options :**

- 485584133433. 1
- 485584133434. 2
- 485584133435. 3
- 485584133436. 4

**Question Number : 245 Question Id : 48558433360 Question Type : MCQ Option Shuffling : No Is Question Mandatory : No Calculator : None Response Time : N.A Think Time : N.A Minimum Instruction Time : 0**

**Correct Marks : 5 Wrong Marks : 1**

**Question Key Details :**

Key	Value
Comprehension	Compl

**Read the passage and answer the questions:**

Mesopotamian texts datable to the third millennium BCE refer to copper coming from a region called Magan. Interestingly enough copper found at Mesopotamian sites also contains traces of nickel. Other archaeological finds suggestive of long-distance contacts include Harappan seals, weights, dice and beads. Mesopotamian texts mention contact with regions named Dilmun, Magan and Meluhha. They mention the products from Meluhha: Carnelian, lapis lazuli, copper, gold, and varieties of wood. A Mesopotamian myth says of Meluhha: "May your bird be the aja-bird, may its call be heard in the royal palace."

Match List I with List II:-

LIST I		LIST II	
A.	Nageshwar	I.	Lapis Lazuli
B.	Shortughai	II.	Copper
C.	Lothal	III.	Shells
D.	Khetri	IV.	Carnelian

Choose the **correct** answer from the options given below:

1. A-IV, B-II, C-III, D-I
2. A-II, B-IV, C-I, D-III
3. A-III, B-I, C-IV, D-II
4. A-I, B-III, C-II, D-IV

**Options :**

485584133437. 1  
485584133438. 2  
485584133439. 3  
485584133440. 4

**Sub-Section Number :**

3

**Sub-Section Id :**

4855842430

**Question Shuffling Allowed :**

No

**Is Section Default? :**

null

**Question Number : 246 Question Id : 48558433361 Question Type : MCQ Option Shuffling : No Is Question Mandatory : No Calculator : None Response Time : N.A Think Time : N.A Minimum Instruction Time : 0**

**Correct Marks : 5 Wrong Marks : 1**

**Question Key Details :**

Key	Value
Comprehension	Comp2

Read the passage and answer following five questions:

Here are verses from the Rigveda invoking Agni, the god of fire, often identified with the sacrificial fire, into which offerings were made so as to reach the other deities. "Bring, O strong one, this sacrifice of ours to the gods, O wise one, as a liberal giver. Bestow on us, O priest, abundant food. Agni, obtain, by sacrificing, mighty wealth for us". Verses such as these were composed in a special kind of Sanskrit, known as Vedic Sanskrit. They were taught orally to men belonging to priestly families.

The 'Rigveda' consists of \_\_\_\_\_ in praise of a variety of deities

1. Stories
2. Plays
3. Scripts
4. Hymns

**Options :**

- 485584133441. 1
- 485584133442. 2
- 485584133443. 3
- 485584133444. 4

**Question Number : 247 Question Id : 48558433362 Question Type : MCQ Option Shuffling : No Is Question Mandatory : No Calculator : None Response Time : N.A Think Time : N.A Minimum Instruction Time : 0**

**Correct Marks : 5 Wrong Marks : 1**

**Question Key Details :**

Key	Value
Comprehension	Comp2

Read the passage and answer following five questions:

Here are verses from the Rigveda invoking Agni, the god of fire, often identified with the sacrificial fire, into which offerings were made so as to reach the other deities. "Bring, O strong one, this sacrifice of ours to the gods, O wise one, as a liberal giver. Bestow on us, O priest, abundant food. Agni, obtain, by sacrificing, mighty wealth for us". Verses such as these were composed in a special kind of Sanskrit, known as Vedic Sanskrit. They were taught orally to men belonging to priestly families.

Identify among the following another deity widely mentioned in the Rigveda.

- 1. Shiva
- 2. Indra
- 3. Vishnu
- 4. Krishna

**Options :**

- 485584133445. 1
- 485584133446. 2
- 485584133447. 3
- 485584133448. 4

**Question Number : 248 Question Id : 48558433363 Question Type : MCQ Option Shuffling : No Is Question Mandatory : No Calculator : None Response Time : N.A Think Time : N.A Minimum Instruction Time : 0**

**Correct Marks : 5 Wrong Marks : 1**

**Question Key Details :**

Key	Value
Comprehension	Comp2

Read the passage and answer following five questions:

Here are verses from the Rigveda invoking Agni, the god of fire, often identified with the sacrificial fire, into which offerings were made so as to reach the other deities. "Bring, O strong one, this sacrifice of ours to the gods, O wise one, as a liberal giver. Bestow on us, O priest, abundant food. Agni, obtain, by sacrificing, mighty wealth for us". Verses such as these were composed in a special kind of Sanskrit, known as Vedic Sanskrit. They were taught orally to men belonging to priestly families.

Identify the timeline of Rigveda compilation.

1. C.1500 and 1000 BCE
2. C.1200 and 1000 BCE
3. C.1100 and 1200 BCE
4. C.1000 and 1500 BCE

**Options :**

485584133449. 1  
485584133450. 2  
485584133451. 3  
485584133452. 4

**Question Number : 249 Question Id : 48558433364 Question Type : MCQ Option Shuffling : No Is Question Mandatory : No Calculator : None Response Time : N.A Think Time : N.A Minimum Instruction Time : 0**

**Correct Marks : 5 Wrong Marks : 1**

**Question Key Details :**

Key	Value
Comprehension	Comp2

Read the passage and answer following five questions:

Here are verses from the Rigveda invoking Agni, the god of fire, often identified with the sacrificial fire, into which offerings were made so as to reach the other deities. "Bring, O strong one, this sacrifice of ours to the gods, O wise one, as a liberal giver. Bestow on us, O priest, abundant food. Agni, obtain, by sacrificing, mighty wealth for us". Verses such as these were composed in a special kind of Sanskrit, known as Vedic Sanskrit. They were taught orally to men belonging to priestly families.

Which language was used to compose texts like Rigveda and Upanishads?

1. Hindavi
2. Pali
3. Sanskrit
4. Prakrit

**Options :**

485584133453. 1  
485584133454. 2  
485584133455. 3  
485584133456. 4

**Question Number : 250 Question Id : 48558433365 Question Type : MCQ Option Shuffling : No Is Question Mandatory : No Calculator : None Response Time : N.A Think Time : N.A Minimum Instruction Time : 0**

**Correct Marks : 5 Wrong Marks : 1**

**Question Key Details :**

Key	Value
Comprehension	Comp2

Read the passage and answer following five questions:

Here are verses from the Rigveda invoking Agni, the god of fire, often identified with the sacrificial fire, into which offerings were made so as to reach the other deities. "Bring, O strong one, this sacrifice of ours to the gods, O wise one, as a liberal giver. Bestow on us, O priest, abundant food. Agni, obtain, by sacrificing, mighty wealth for us". Verses such as these were composed in a special kind of Sanskrit, known as Vedic Sanskrit. They were taught orally to men belonging to priestly families.

Identify the 'sacrifices' mentioned in Rigveda.

- A. Samsara
- B. Rajasuya
- C. Kutagarashala
- D. Soma
- E. Ashvamedha

Choose the **correct** answer from the options given below:

- 1. A, B only
- 2. B, D only
- 3. B, E only
- 4. C, E only

**Options :**

- 485584133457. 1
- 485584133458. 2
- 485584133459. 3
- 485584133460. 4

## Legal Studies

Group Number :	9
Group Id :	485584747
Group Maximum Duration :	45
Group Minimum Duration :	45
Show Attended Group? :	No
Edit Attended Group? :	No
Break time :	0
Group Marks :	200
Is this Group for Examiner? :	No
Examiner permission :	Cant View
Show Progress Bar? :	No

## Legal Studies

Section Id :	485584861
Section Number :	1
Section type :	Online

<b>Mandatory or Optional :</b>	Mandatory
<b>Number of Questions :</b>	50
<b>Number of Questions to be attempted :</b>	40
<b>Section Marks :</b>	200
<b>Enable Mark as Answered Mark for Review and Clear Response :</b>	Yes
<b>Maximum Instruction Time :</b>	0
<b>Sub-Section Number :</b>	1
<b>Sub-Section Id :</b>	4855842431
<b>Question Shuffling Allowed :</b>	Yes
<b>Is Section Default? :</b>	null

**Question Number : 251 Question Id : 48558433836 Question Type : MCQ Option Shuffling : No Is Question Mandatory : No Calculator : None Response Time : N.A Think Time : N.A Minimum Instruction Time : 0**

**Correct Marks : 5 Wrong Marks : 1**

**Question Key Details :**

Key	Value
Comprehension	MCQ

India's first Attorney General was

1. M.C. Setalvad
2. Justice P. Sathasivam
3. Justice V. Ramaswamy
4. Mukul Rohtagi

**Options :**

485584135341. 1
485584135342. 2
485584135343. 3
485584135344. 4

**Question Number : 251 Question Id : 48558433836 Question Type : MCQ Option Shuffling : No Is Question Mandatory : No Calculator : None Response Time : N.A Think Time : N.A Minimum Instruction Time : 0**

**Correct Marks : 5 Wrong Marks : 1**

**Question Key Details :**

Key	Value
Comprehension	MCQ

ಭಾರತದ ಮೊದಲ ಅಟಾರ್ನಿ ಜನರಲ್ ಆಗಿದ್ದವರು:

1. ಎಂ.ಸಿ. ಸಿತಲ್ವಾಡ್
2. ಜಸ್ಟೀಸ್ ಪಿ. ಸದಾಶಿವಂ
3. ಜಸ್ಟೀಸ್ ವಿ. ರಂಗಸ್ವಾಮಿ
4. ಮುಕುಲ್ ರೋಹ್ಟಗಿ

**Options :**

485584135341. 1
485584135342. 2

485584135343. 3

485584135344. 4

**Question Number : 252 Question Id : 48558433837 Question Type : MCQ Option Shuffling : No Is Question Mandatory : No Calculator : None Response Time : N.A Think Time : N.A Minimum Instruction Time : 0**

**Correct Marks : 5 Wrong Marks : 1**

**Question Key Details :**

Key	Value
Comprehension	MCQ

What is enshrined in Article 217 of the Indian Constitution?

1. The procedure for appointment of judges of Supreme Court
2. The procedure for appointment of judges of High Court
3. The procedure for appointment of judges of lower Judiciary
4. The procedure of removal of Judges

**Options :**

485584135345. 1

485584135346. 2

485584135347. 3

485584135348. 4

**Question Number : 252 Question Id : 48558433837 Question Type : MCQ Option Shuffling : No Is Question Mandatory : No Calculator : None Response Time : N.A Think Time : N.A Minimum Instruction Time : 0**

**Correct Marks : 5 Wrong Marks : 1**

**Question Key Details :**

Key	Value
Comprehension	MCQ

ಭಾರತದ ಸಂವಿಧಾನದ ಅನುಚ್ಛೇದ 217ರಲ್ಲಿ ಯಾವುದು ಪ್ರತಿಷ್ಠಾಪಿತವಾಗಿದೆ?

1. ಸುಪ್ರೀಂ ಕೋರ್ಟ್‌ನ ನ್ಯಾಯಾಧೀಶರನ್ನು ನೇಮಕಗೊಳಿಸುವ ಪ್ರಕ್ರಿಯೆ
2. ಹೈಕೋರ್ಟ್ ನ್ಯಾಯಾಧೀಶರನ್ನು ನೇಮಕಗೊಳಿಸುವ ಪ್ರಕ್ರಿಯೆ
3. ಕೆಳ ಹಂತದ ನ್ಯಾಯಾಲಯಗಳಿಗೆ ನ್ಯಾಯಾಧೀಶರನ್ನು ನೇಮಕಗೊಳಿಸುವ ಪ್ರಕ್ರಿಯೆ
4. ನ್ಯಾಯಾಧೀಶರನ್ನು ಪದಚ್ಯುತಗೊಳಿಸುವ ಪ್ರಕ್ರಿಯೆ

**Options :**

485584135345. 1

485584135346. 2

485584135347. 3

485584135348. 4

**Question Number : 253 Question Id : 48558433838 Question Type : MCQ Option Shuffling : No Is Question Mandatory : No Calculator : None Response Time : N.A Think Time : N.A Minimum Instruction Time : 0**

**Correct Marks : 5 Wrong Marks : 1**

**Question Key Details :**

Key	Value
-----	-------

Comprehension	MCQ
---------------	-----

The doctrine of *Locus Standi* means

1. Right to respect the court
2. Right to appear before the court
3. Right to stand with the court
4. Right to seek Justice

**Options :**

485584135349. 1  
485584135350. 2  
485584135351. 3  
485584135352. 4

**Question Number : 253 Question Id : 48558433838 Question Type : MCQ Option Shuffling : No Is Question Mandatory : No Calculator : None Response Time : N.A Think Time : N.A Minimum Instruction Time : 0**

**Correct Marks : 5 Wrong Marks : 1**

**Question Key Details :**

Key	Value
Comprehension	MCQ

ಲೋಕಸ್ ಸ್ಟಾಂಡಿ ಸಿದ್ಧಾಂತದ ಅರ್ಥವೇನೆಂದರೆ:

1. ನ್ಯಾಯಾಲಯವನ್ನು ಗೌರವಿಸುವ ಹಕ್ಕು
2. ನ್ಯಾಯಾಲಯದ ಸಮಕ್ಷಮ ಹಾಜರಾಗುವ ಹಕ್ಕು
3. ನ್ಯಾಯಾಲಯದ ಪರವಾಗಿ ನಿಲ್ಲುವ ಹಕ್ಕು
4. ನ್ಯಾಯವನ್ನು ಕೇಳುವ ಹಕ್ಕು

**Options :**

485584135349. 1  
485584135350. 2  
485584135351. 3  
485584135352. 4

**Question Number : 254 Question Id : 48558433839 Question Type : MCQ Option Shuffling : No Is Question Mandatory : No Calculator : None Response Time : N.A Think Time : N.A Minimum Instruction Time : 0**

**Correct Marks : 5 Wrong Marks : 1**

**Question Key Details :**

Key	Value
Comprehension	MCQ



Which Article of the Constitution of India says that the advisory jurisdiction of Supreme Court can be sought by President of India?

1. Article 140
2. Article 141
3. Article 142
4. Article 143

**Options :**

485584135353. 1  
485584135354. 2  
485584135355. 3  
485584135356. 4

**Question Number : 254 Question Id : 48558433839 Question Type : MCQ Option Shuffling : No Is Question Mandatory : No Calculator : None Response Time : N.A Think Time : N.A Minimum Instruction Time : 0**

**Correct Marks : 5 Wrong Marks : 1**

**Question Key Details :**

Key	Value
Comprehension	MCQ

ಸುಪ್ರೀಂ ಕೋರ್ಟ್‌ನ ಸಲಹಾ ವ್ಯಾಪ್ತಿಯ ಸಹಾಯವನ್ನು ಭಾರತದ ರಾಷ್ಟ್ರಪತಿಗಳು ಕೇಳಬಹುದು ಎಂದು ಭಾರತ ಸಂವಿಧಾನದ ಯಾವ ಅನುಚ್ಛೇದವು ಹೇಳುತ್ತದೆ?

1. ಅನುಚ್ಛೇದ 140
2. ಅನುಚ್ಛೇದ 141
3. ಅನುಚ್ಛೇದ 142
4. ಅನುಚ್ಛೇದ 143

**Options :**

485584135353. 1  
485584135354. 2  
485584135355. 3  
485584135356. 4

**Question Number : 255 Question Id : 48558433840 Question Type : MCQ Option Shuffling : No Is Question Mandatory : No Calculator : None Response Time : N.A Think Time : N.A Minimum Instruction Time : 0**

**Correct Marks : 5 Wrong Marks : 1**

**Question Key Details :**

Key	Value
Comprehension	MCQ

With respect to separation of power, which of the following are true?

- A. It requires non-Harmonious relation between the legislative, Executive and Judiciary
- B. Federal Government has law making powers different than that of states or provinces
- C. It allows for liberty as it avoids concentration of powers in one branch.
- D. It promotes efficiency
- E. It facilitates checks and balances of each branch in state.

Choose the correct answer from the options given below:

- 1. B, C, D, E only
- 2. B, C, D only
- 3. C, D, E only
- 4. A, C, B only

**Options :**

- 485584135357. 1
- 485584135358. 2
- 485584135359. 3
- 485584135360. 4

**Question Number : 255 Question Id : 48558433840 Question Type : MCQ Option Shuffling : No Is Question Mandatory : No Calculator : None Response Time : N.A Think Time : N.A Minimum Instruction Time : 0**

**Correct Marks : 5 Wrong Marks : 1**

**Question Key Details :**

Key	Value
Comprehension	MCQ

ಪ್ರತ್ಯೇಕತೆಯ ಅಧಿಕಾರಕ್ಕೆ ಸಂಬಂಧಿಸಿ, ಈ ಕೆಳಗಿನವುಗಳಲ್ಲಿ ಯಾವುದು ಸರಿಯಾಗಿದೆ?

- A. ಅದಕ್ಕೆ ಶಾಸಕಾಂಗ, ಕಾರ್ಯಾಂಗ ಮತ್ತು ನ್ಯಾಯಾಂಗದ ನಡುವೆ ಸೌಹಾರ್ದವಿಲ್ಲದ ಸಂಬಂಧದ ಅಗತ್ಯವಿರುತ್ತದೆ
- B. ಒಕ್ಕೂಟ (ಕೇಂದ್ರ) ಸರ್ಕಾರವು ರಾಜ್ಯಗಳು ಮತ್ತು ಪ್ರಾಂತ್ಯಗಳಿಗಿಂತ ವಿಭಿನ್ನವಾದ ನೀತಿ-ನಿರೂಪಣೆ ಅಧಿಕಾರಗಳನ್ನು ಹೊಂದಿರುತ್ತದೆ.
- C. ಒಂದು ಪೀಠಕ್ಕೆ ಅಧಿಕಾರದ ಕೇಂದ್ರೀಕರಣವನ್ನು ತಪ್ಪಿಸುವುದಕ್ಕಾಗಿ ಅದು ಸ್ವಾತಂತ್ರ್ಯಕ್ಕೆ ಅವಕಾಶವನ್ನು ನೀಡುತ್ತದೆ.
- D. ಅದು ದಕ್ಷತೆಯನ್ನು ಪ್ರೋತ್ಸಾಹಿಸುತ್ತದೆ
- E. ಅದು ರಾಜ್ಯದ ಪ್ರತಿಯೊಂದು ಶಾಖೆಯ ಪರಿಶೀಲನೆಗಳು ಮತ್ತು ಸಮತೋಲನಗಳಿಗೆ ಅನುಕೂಲ ಕಲ್ಪಿಸುತ್ತದೆ.

ಈ ಕೆಳಗಿನ ಆಯ್ಕೆಗಳಿಂದ ಸರಿಯಾದ ಉತ್ತರವನ್ನು ಆರಿಸಿ:

- 1. B, C, D, E ಮಾತ್ರ
- 2. B, C, D ಮಾತ್ರ
- 3. C, D, E ಮಾತ್ರ
- 4. A, C, B ಮಾತ್ರ

**Options :**

- 485584135357. 1
- 485584135358. 2
- 485584135359. 3
- 485584135360. 4

**Question Number : 256 Question Id : 48558433841 Question Type : MCQ Option Shuffling : No Is Question Mandatory : No Calculator : None Response Time : N.A Think Time : N.A Minimum Instruction Time : 0**

**Correct Marks : 5 Wrong Marks : 1**

**Question Key Details :**

Key	Value
Comprehension	MCQ

Arrange the courts of civil Judges in a district in ascending order.

- A. First class Judicial Magistrate court
- B. Second Class Judicial Magistrate court
- C. Munsiff Courts
- D. Chief Judicial Magistrate Court

Choose the correct answer from the options given below:

- 1. B, D, A, C
- 2. C, B, A, D
- 3. A, B, C, D
- 4. D, A, C, B

**Options :**

- 485584135361. 1
- 485584135362. 2
- 485584135363. 3
- 485584135364. 4

**Question Number : 256 Question Id : 48558433841 Question Type : MCQ Option Shuffling : No Is Question Mandatory : No Calculator : None Response Time : N.A Think Time : N.A Minimum Instruction Time : 0**

**Correct Marks : 5 Wrong Marks : 1**

**Question Key Details :**

Key	Value
Comprehension	MCQ

ಒಂದು ಜಿಲ್ಲೆಯಲ್ಲಿರುವ ಸಿವಿಲ್ ನ್ಯಾಯಾಧೀಶರ ನ್ಯಾಯಾಲಯಗಳನ್ನು ಏರಿಕೆಯ ಕ್ರಮದಲ್ಲಿ ಜೋಡಿಸಿ.

- A. ಪ್ರಥಮ ದರ್ಜೆ ನ್ಯಾಯಿಕ ದಂಡಾಧಿಕಾರಿಗಳ ನ್ಯಾಯಾಲಯ
- B. ದ್ವಿತೀಯ ದರ್ಜೆ ನ್ಯಾಯಿಕ ದಂಡಾಧಿಕಾರಿಗಳ ನ್ಯಾಯಾಲಯ
- C. ಮುನ್ಸಿಫ್ ನ್ಯಾಯಾಲಯಗಳು
- D. ಪ್ರಧಾನ ನ್ಯಾಯಿಕ ದಂಡಾಧಿಕಾರಿಗಳ ನ್ಯಾಯಾಲಯ

ಈ ಕೆಳಗಿನ ಆಯ್ಕೆಗಳಿಂದ ಸರಿಯಾದ ಉತ್ತರವನ್ನು ಆರಿಸಿ:

- 1. B, D, A, C
- 2. C, B, A, D
- 3. A, B, C, D
- 4. D, A, C, B

**Options :**

- 485584135361. 1
- 485584135362. 2
- 485584135363. 3
- 485584135364. 4

**Question Number : 257 Question Id : 48558433842 Question Type : MCQ Option Shuffling : No Is Question Mandatory : No Calculator : None Response Time : N.A Think Time : N.A Minimum Instruction Time : 0**

**Correct Marks : 5 Wrong Marks : 1**

**Question Key Details :**

Key	Value
Comprehension	MCQ

Arrange the stages of investigations initiated by police officer for the collection of evidence in order of their occurrence:

- A. Collection of evidence
- B. Ascertaining facts and circumstances
- C. Proceeding to spot
- D. Discovery and arrest of suspected offender
- E. Investigation ends in police report to magistrate

Choose the correct answer from the options given below:

- 1. C, D, B, A,E
- 2. C, B, D, A, E
- 3. B, E, A, C, D
- 4. A, B, C, D, E

**Options :**

- 485584135365. 1
- 485584135366. 2
- 485584135367. 3
- 485584135368. 4

Question Number : 257 Question Id : 48558433842 Question Type : MCQ Option Shuffling : No Is Question Mandatory : No Calculator : None Response Time : N.A Think Time : N.A Minimum Instruction Time : 0  
Correct Marks : 5 Wrong Marks : 1

Question Key Details :

Key	Value
Comprehension	MCQ

ಸಾಕ್ಷ್ಯಗಳ ಸಂಗ್ರಹಕ್ಕೆ ಪೊಲೀಸ್ ಅಧಿಕಾರಿಯು ಆರಂಭಿಸಿರುವ ತನಿಖೆಯ ಹಂತಗಳನ್ನು ಅವುಗಳು ಸಂಭವಿಸುವ ಕ್ರಮದಲ್ಲಿ ಜೋಡಿಸಿ:

- ಸಾಕ್ಷ್ಯಗಳ ಸಂಗ್ರಹ
- ಸತ್ಯಗಳು ಮತ್ತು ಸನ್ನಿವೇಶಗಳ ನಿರ್ಧರಣೆ
- ಸ್ಥಳಕ್ಕೆ ತೆರಳುವುದು
- ಶಂಕಿತ ತಪ್ಪಿತಸ್ಥನನ್ನು ಪತ್ತೆ ಹಚ್ಚುವುದು ಮತ್ತು ಬಂಧಿಸುವುದು
- ದಂಡಾಧಿಕಾರಿಗಳಿಗೆ ಪೊಲೀಸ್ ವರದಿಯನ್ನು ಸಲ್ಲಿಸಿದಾಗ ತನಿಖೆಯು ಮುಕ್ತಾಯಗೊಳ್ಳುತ್ತದೆ

ಈ ಕೆಳಗಿನ ಆಯ್ಕೆಗಳಿಂದ ಸರಿಯಾದ ಉತ್ತರವನ್ನು ಆರಿಸಿ:

1. C, D, B, A,E
2. C, B, D, A, E
3. B, E, A, C, D
4. A, B, C, D, E

Options :

485584135365. 1
485584135366. 2
485584135367. 3
485584135368. 4

Question Number : 258 Question Id : 48558433843 Question Type : MCQ Option Shuffling : No Is Question Mandatory : No Calculator : None Response Time : N.A Think Time : N.A Minimum Instruction Time : 0

Correct Marks : 5 Wrong Marks : 1

Question Key Details :

Key	Value
Comprehension	MCQ

A women in sheer destitute and impoverishment attempted to kill herself after failing in all ways to arrange for food for her starving children. She did it knowingly therefore she will be held guilty by the Court because:

1. the act was done under compulsion
2. the act was done out of necessity
3. the act was done due to insanity
4. the act was done intentionally

Options :

485584135369. 1
485584135370. 2

485584135371. 3

485584135372. 4

**Question Number : 258 Question Id : 48558433843 Question Type : MCQ Option Shuffling : No Is Question Mandatory : No Calculator : None Response Time : N.A Think Time : N.A Minimum Instruction Time : 0**

**Correct Marks : 5 Wrong Marks : 1**

**Question Key Details :**

Key	Value
Comprehension	MCQ

ಕಡು ಕಷ್ಟ ಮತ್ತು ಬಡತನದಲ್ಲಿರುವ ಅಶಕ್ತ ಮಹಿಳೆಯೊಬ್ಬರು ಹಸಿದಿರುವ ತನ್ನ ಮಕ್ಕಳಿಗೆ ಆಹಾರದ ವ್ಯವಸ್ಥೆ ಮಾಡಲು ಎಲ್ಲ ರೀತಿಯಿಂದಲೂ ವಿಫಲರಾದಾಗ ಆತ್ಮಹತ್ಯೆಗೆ ಯತ್ನಿಸುತ್ತಾರೆ. ಅವರು ತಿಳಿದೇ ಈ ಕೃತ್ಯವನ್ನು ಮಾಡಿರುತ್ತಾರೆ ಹಾಗೂ ಅವರು ತಪ್ಪಿತಸ್ತರೆಂದು ನ್ಯಾಯಾಲಯವೂ ನಿರ್ಧರಿಸುತ್ತದೆ. ಏಕೆಂದರೆ:

1. ಈ ಕೃತ್ಯವನ್ನು ಅನಿವಾರ್ಯವಾಗಿ ಮಾಡಿರುತ್ತಾರೆ
2. ಅನಿವಾರ್ಯವಾದ ಕಾರಣಕ್ಕೆ ಆ ಕೃತ್ಯವನ್ನು ಮಾಡಲಾಗಿದೆ
3. ವಿಕೃಪ್ತ ಮನಃಸ್ಥಿತಿಯಿಂದ ಈ ಕೃತ್ಯವನ್ನು ಮಾಡಲಾಗಿದೆ
4. ಈ ಕೃತ್ಯವನ್ನು ಉದ್ದೇಶಪೂರ್ವಕವಾಗಿ ಮಾಡಲಾಗಿದೆ.

**Options :**

485584135369. 1

485584135370. 2

485584135371. 3

485584135372. 4

**Question Number : 259 Question Id : 48558433844 Question Type : MCQ Option Shuffling : No Is Question Mandatory : No Calculator : None Response Time : N.A Think Time : N.A Minimum Instruction Time : 0**

**Correct Marks : 5 Wrong Marks : 1**

**Question Key Details :**

Key	Value
Comprehension	MCQ

Crime committed by structured groups typically involving the distribution of illegal goods and services to others is known as-

1. White Collar crime
2. Crime against groups
3. Organised Crimes
4. Gang War

**Options :**

485584135373. 1

485584135374. 2

485584135375. 3

485584135376. 4

**Question Number : 259 Question Id : 48558433844 Question Type : MCQ Option Shuffling : No Is Question Mandatory : No Calculator : None Response Time : N.A Think Time : N.A Minimum Instruction Time : 0**

Correct Marks : 5 Wrong Marks : 1

Question Key Details :

Key	Value
Comprehension	MCQ

ಯೋಜಿತ ಗುಂಪುಗಳಿಂದ, ಇತರರಿಗೆ ಅಕ್ರಮ ಸರಕುಗಳು ಮತ್ತು ಸೇವೆಗಳನ್ನು ಒದಗಿಸುವುದನ್ನು ಒಳಗೊಂಡು ನಡೆಸಿದ ಅಪರಾಧವನ್ನು ಹೀಗೆ ಕರೆಯಲಾಗುತ್ತದೆ -

1. ಬಿಳಿ ಕಾಲರ್ ಅಪರಾಧ
2. ಗುಂಪುಗಳ ವಿರುದ್ಧದ ಅಪರಾಧ
3. ಯೋಜಿತ ಅಪರಾಧಗಳು
4. ಗ್ಯಾಂಗ್ ವಾರ್ (ಗುಂಪು ಘರ್ಷಣೆ)

Options :

485584135373. 1  
485584135374. 2  
485584135375. 3  
485584135376. 4

Question Number : 260 Question Id : 48558433845 Question Type : MCQ Option Shuffling : No Is Question Mandatory : No Calculator : None Response Time : N.A Think Time : N.A Minimum Instruction Time : 0

Correct Marks : 5 Wrong Marks : 1

Question Key Details :

Key	Value
Comprehension	MCQ

If the intention is to reap fruits from the trees, the trees would be considered

1. Immovable property
2. Movable property
3. General property
4. Intangible property

Options :

485584135377. 1  
485584135378. 2  
485584135379. 3  
485584135380. 4

Question Number : 260 Question Id : 48558433845 Question Type : MCQ Option Shuffling : No Is Question Mandatory : No Calculator : None Response Time : N.A Think Time : N.A Minimum Instruction Time : 0

Correct Marks : 5 Wrong Marks : 1

Question Key Details :

Key	Value
Comprehension	MCQ

ಮರಗಳಿಂದ ಹಣ್ಣುಗಳನ್ನು ಬೆಳೆಯುವುದು ಉದ್ದೇಶವಾಗಿದ್ದರೆ, ಆ ಮರಗಳನ್ನು ಈ ರೀತಿ ಪರಿಗಣಿಸಲಾಗುತ್ತದೆ:

1. ಸ್ವೀರಾಸ್ತಿ
2. ಚರಾಸ್ತಿ
3. ಸಾಮಾನ್ಯ ಆಸ್ತಿ
4. ಅಮೂರ್ತ ಆಸ್ತಿ

**Options :**

485584135377. 1  
485584135378. 2  
485584135379. 3  
485584135380. 4

**Question Number : 261 Question Id : 48558433846 Question Type : MCQ Option Shuffling : No Is Question Mandatory : No Calculator : None Response Time : N.A Think Time : N.A Minimum Instruction Time : 0**

**Correct Marks : 5 Wrong Marks : 1**

**Question Key Details :**

Key	Value
Comprehension	MCQ

A sells his garden as well as house through the instrument to B. whereas B, wants to retain only the house and wants to cancel the garden. B has to retain the garden if he wants the house or cancel the whole transaction.' Which of the following doctrine is applicable in this instance

1. Doctrine of lis Pendens
2. Doctrine of Suitability
3. Doctrine of Election
4. Doctrine of Exchange

**Options :**

485584135381. 1  
485584135382. 2  
485584135383. 3  
485584135384. 4

**Question Number : 261 Question Id : 48558433846 Question Type : MCQ Option Shuffling : No Is Question Mandatory : No Calculator : None Response Time : N.A Think Time : N.A Minimum Instruction Time : 0**

**Correct Marks : 5 Wrong Marks : 1**

**Question Key Details :**

Key	Value
Comprehension	MCQ



A ಯು ತನ್ನ ಹೂದೋಟವನ್ನು ಹಾಗೂ ಮನೆಯನ್ನು ದಾಖಲೆಯೊಂದರ ಮೂಲಕ B ಗೆ ಮಾರಾಟ ಮಾಡುತ್ತಾನೆ. ಆದರೆ, B ಯು ಮನೆಯನ್ನು ಮಾತ್ರ ಉಳಿಸಿಕೊಂಡು ಹೂದೋಟದ ಕ್ರಯಪತ್ರವನ್ನು ರದ್ದುಪಡಿಸಲು ಬಯಸುತ್ತಾನೆ. ಮನೆಯನ್ನು ಬಯಸುತ್ತಿದ್ದರೆ B ಯು ಹೂದೋಟವನ್ನೂ ಉಳಿಸಿಕೊಳ್ಳಬೇಕು ಅಥವಾ ಇಡೀ ವ್ಯವಹಾರವನ್ನೇ ರದ್ದುಪಡಿಸಬೇಕು. ಈ ಸಂದರ್ಭದಲ್ಲಿ ಈ ಕೆಳಗಿನವುಗಳಲ್ಲಿ ಯಾವ doctrine ಅನ್ವಯವಾಗುತ್ತದೆ?

1. ಲಿಸ್ ಪೆಂಡೆನ್ಸ್ ಸಿದ್ಧಾಂತ
2. ಸೂಕ್ತತೆಯ ಸಿದ್ಧಾಂತ
3. ಆಯ್ಕೆಯ ಸಿದ್ಧಾಂತ
4. ವಿನಿಮಯದ ಸಿದ್ಧಾಂತ

**Options :**

485584135381. 1  
 485584135382. 2  
 485584135383. 3  
 485584135384. 4

**Question Number : 262 Question Id : 48558433847 Question Type : MCQ Option Shuffling : No Is Question Mandatory : No Calculator : None Response Time : N.A Think Time : N.A Minimum Instruction Time : 0**

**Correct Marks : 5 Wrong Marks : 1**

**Question Key Details :**

Key	Value
Comprehension	MCQ

In what kind of transfer of property, the right and liabilities of the parties to exchange shall be that of the rights and liabilities of the buyer to the extent of receiving and that of the seller to the extent of giving.

1. Gift
2. Lease
3. Exchange
4. Mortgage

**Options :**

485584135385. 1  
 485584135386. 2  
 485584135387. 3  
 485584135388. 4

**Question Number : 262 Question Id : 48558433847 Question Type : MCQ Option Shuffling : No Is Question Mandatory : No Calculator : None Response Time : N.A Think Time : N.A Minimum Instruction Time : 0**

**Correct Marks : 5 Wrong Marks : 1**

**Question Key Details :**

Key	Value
Comprehension	MCQ

ಯಾವ ಬಗೆಯ ಆಸ್ತಿ ವರ್ಗಾವಣೆಯಲ್ಲಿ, ಪಕ್ಷಗಾರರ ಹಕ್ಕುಗಳು ಮತ್ತು ಬಾಧ್ಯತೆಗಳು ಖರೀದಿದಾರನು ಸ್ವೀಕರಿಸುವ ಮಟ್ಟಿಗೆ ಮತ್ತು ಮಾರಾಟಗಾರನು ನೀಡುವ ಮಟ್ಟಿಗೆ ಹಕ್ಕುಗಳು ಮತ್ತು ಬಾಧ್ಯತೆಗಳು ವರ್ಗಾವಣೆಯಾಗಬೇಕು?

1. ಉಡುಗೊರೆ
2. ಭೋಗ್ಯ (ಲೀಸ್)
3. ವಿನಿಮಯ
4. ಅಡಮಾನ (ಮಾರ್ಟ್‌ಗೇಜ್)

**Options :**

485584135385. 1  
 485584135386. 2  
 485584135387. 3  
 485584135388. 4

**Question Number : 263 Question Id : 48558433848 Question Type : MCQ Option Shuffling : No Is Question Mandatory : No Calculator : None Response Time : N.A Think Time : N.A Minimum Instruction Time : 0**

**Correct Marks : 5 Wrong Marks : 1**

**Question Key Details :**

Key	Value
Comprehension	MCQ

Match List I with List II

LIST I		LIST II	
A.	False Imprisonment	I.	act of deliberate physical harm to victim
B.	Unlawful harassment	II.	claimant to be knowingly confined
C.	Tresspass to Chattels	III.	invade real property without claimants approval
D.	Tresspass to land	IV.	intermeddle with a chattel which was in the possession of claimant

Choose the correct answer from the options given below:

1. A-I, B-IV, C-II, D-III
2. A-II, B-I, C-IV, D-III
3. A-III, B-II, C-I, D-IV
4. A-IV, B-III, C-I, D-II

**Options :**

485584135389. 1  
 485584135390. 2  
 485584135391. 3  
 485584135392. 4

Question Number : 263 Question Id : 48558433848 Question Type : MCQ Option Shuffling : No Is Question Mandatory : No Calculator : None Response Time : N.A Think Time : N.A Minimum Instruction Time : 0

Correct Marks : 5 Wrong Marks : 1

Question Key Details :

Key	Value
Comprehension	MCQ

ಪಟ್ಟಿ - I ಅನ್ನು ಪಟ್ಟಿ - IIರ ಜೊತೆ ಹೊಂದಿಸಿ.

LIST I		LIST II	
A.	ಮಿಥ್ಯಾ ಜೈಲುವಾಸ	I.	ಬಾಧಿತನಿಗೆ ಉದ್ದೇಶಪೂರ್ವಕವಾಗಿ ದೈಹಿಕ ಹಾನಿ ಮಾಡುವ ಕೃತ್ಯ
B.	ಕಾನೂನು-ಬಾಹಿರ ಶೋಷಣೆ	II.	ವಾದಿಯನ್ನು ಉದ್ದೇಶಪೂರ್ವಕವಾಗಿ ಬಂಧನದಲ್ಲಿಡುವುದು
C.	ಸಂಪತ್ತಿಗೆ ಅಕ್ರಮ ಪ್ರವೇಶ	III.	ವಾದಿಯ ಅನುಮತಿಯಿಲ್ಲದೆ ಸ್ವಿರಾಸ್ತಿಗೆ ನುಗ್ಗುವುದು
D.	ಜಮೀನಿಗೆ ಅಕ್ರಮ ಪ್ರವೇಶ	IV.	ವಾದಿ/ದಾವೆದಾರನ ಸ್ವಾಧೀನದಲ್ಲಿ ಇರುವ ಚರ ಸಂಪತ್ತಿನಲ್ಲಿ ಹಸ್ತಕ್ಷೇಪ

ಈ ಕೆಳಗಿನ ಆಯ್ಕೆಗಳಿಂದ ಸರಿಯಾದ ಉತ್ತರವನ್ನು ಆರಿಸಿ:

1. A-I, B-IV, C-II, D-III
2. A-II, B-I, C-IV, D-III
3. A-III, B-II, C-I, D-IV
4. A-IV, B-III, C-I, D-II

Options :

485584135389. 1
485584135390. 2
485584135391. 3
485584135392. 4

Question Number : 264 Question Id : 48558433849 Question Type : MCQ Option Shuffling : No Is Question Mandatory : No Calculator : None Response Time : N.A Think Time : N.A Minimum Instruction Time : 0

Correct Marks : 5 Wrong Marks : 1

Question Key Details :

Key	Value
Comprehension	MCQ

The principle of "Duty of Care" is explained in which case:-

1. Donoghue v. Stevenson
2. Rylands v. Fletcher
3. Ashby v. White
4. M.C. Mehta v. Union of India

Options :

485584135393. 1

485584135394. 2

485584135395. 3

485584135396. 4

**Question Number : 264 Question Id : 48558433849 Question Type : MCQ Option Shuffling : No Is Question Mandatory : No Calculator : None Response Time : N.A Think Time : N.A Minimum Instruction Time : 0**

**Correct Marks : 5 Wrong Marks : 1**

**Question Key Details :**

Key	Value
Comprehension	MCQ

"ಆರೈಕೆಯ ಕರ್ತವ್ಯ" ನಿಯಮವನ್ನು ಈ ಕೆಳಗಿನ ಯಾವ ಪ್ರಕರಣದಲ್ಲಿ ವಿವರಿಸಲಾಗಿದೆ?

1. ಡೊನೋಗ್ಯೋ ವರ್ಸಸ್ ಸ್ವಿವನ್ಸ್‌ನ್
2. ರೈಲ್ವಾಂಡ್ಸ್ ವರ್ಸಸ್ ಫೈಚರ್
3. ಆಶ್ಲಿ ವರ್ಸಸ್ ವೈಟ್
4. ಎಂ.ಸಿ. ಮೆಹ್ತಾ ವರ್ಸಸ್ ಯೂನಿಯನ್ ಆಫ್ ಇಂಡಿಯಾ

**Options :**

485584135393. 1

485584135394. 2

485584135395. 3

485584135396. 4

**Question Number : 265 Question Id : 48558433850 Question Type : MCQ Option Shuffling : No Is Question Mandatory : No Calculator : None Response Time : N.A Think Time : N.A Minimum Instruction Time : 0**

**Correct Marks : 5 Wrong Marks : 1**

**Question Key Details :**

Key	Value
Comprehension	MCQ

A contract without consideration is

1. valid
2. Void
3. Voidable
4. Void ab initio

**Options :**

485584135397. 1

485584135398. 2

485584135399. 3

485584135400. 4

**Question Number : 265 Question Id : 48558433850 Question Type : MCQ Option Shuffling : No Is Question Mandatory : No Calculator : None Response Time : N.A Think Time : N.A Minimum Instruction Time : 0**

**Correct Marks : 5 Wrong Marks : 1**

**Question Key Details :**

Key	Value
Comprehension	MCQ

ಪರಿಗಣನೆಯಿಲ್ಲದ ಒಂದು ಒಪ್ಪಂದವು:

1. ಮಾನ್ಯವಾಗಿದೆ
2. ಶೂನ್ಯ
3. ಶೂನ್ಯ ಯೋಗ್ಯ
4. ಆರಂಭದಿಂದಲೇ ಶೂನ್ಯ

**Options :**

485584135397. 1  
485584135398. 2  
485584135399. 3  
485584135400. 4

**Question Number : 266 Question Id : 48558433851 Question Type : MCQ Option Shuffling : No Is Question Mandatory : No Calculator : None Response Time : N.A Think Time : N.A Minimum Instruction Time : 0**

**Correct Marks : 5 Wrong Marks : 1**

**Question Key Details :**

Key	Value
Comprehension	MCQ

A contract can be enforced before the court only if it creates legal obligation among the parties. In light of the statement choose the correct answer:

- A. An agreement entered into with a minor is enforceable in exceptional circumstance
- B. An agreement entered between husband and wife cannot be enforced in the court
- C. An agreement with inadequate consideration is a voidable agreement
- D. A promise without consideration can create a valid contract
- E. An agreement with an intoxicated person cannot be called as contract

Choose the correct answer from the options given below:

1. A, B, D only
2. B and E only
3. C, D and E only
4. A, C and D only

**Options :**

485584135401. 1  
485584135402. 2  
485584135403. 3  
485584135404. 4

**Question Number : 266 Question Id : 48558433851 Question Type : MCQ Option Shuffling : No Is Question Mandatory : No Calculator : None Response Time : N.A Think Time : N.A Minimum Instruction Time : 0**

**Correct Marks : 5 Wrong Marks : 1**

**Question Key Details :**

Key	Value
Comprehension	MCQ

ಪಕ್ಷಗಾರರ ನಡುವೆ ನ್ಯಾಯಿಕ ಬಾಧ್ಯತೆಯನ್ನು ಸೃಷ್ಟಿಸುವುದಿದ್ದರೆ ಮಾತ್ರ ಒಂದು ಒಪ್ಪಂದವನ್ನು ನ್ಯಾಯಾಲಯದ ಸಮಕ್ಷಮದಲ್ಲಿ ಜಾರಿ ಮಾಡಬಹುದು. ಈ ಹೇಳಿಕೆಯನ್ನು ಪರಿಗಣಿಸಿ, ಸರಿಯಾದ ಉತ್ತರವನ್ನು ಆರಿಸಿ.

- ಅಪ್ರಾಪ್ತರೊಂದಿಗೆ ಮಾಡಿಕೊಂಡ ಒಪ್ಪಂದವು ವಿಶೇಷ ಸಂದರ್ಭಗಳಲ್ಲಿ ಜಾರಿ ಮಾಡುವಂಥದಾಗಿರುತ್ತದೆ.
- ಪತಿ ಮತ್ತು ಪತ್ನಿಯ ನಡುವೆ ಮಾಡಿಕೊಂಡಿರುವ ಒಪ್ಪಂದವನ್ನು ನ್ಯಾಯಾಲಯದಲ್ಲಿ ಜಾರಿ ಮಾಡಲು ಸಾಧ್ಯವಿಲ್ಲ.
- ಪರ್ಯಾಪ್ತವಲ್ಲದ ಪರಿಗಣನೆಗಳಿಲ್ಲದ ಒಪ್ಪಂದವು ಶೂನ್ಯಗೊಳಿಸಬಹುದಾದ ಒಪ್ಪಂದವಾಗಿರುತ್ತದೆ.
- ಪರಿಗಣನೆಯಿಲ್ಲದ ಭರವಸೆಯು ಒಂದು ಮಾನ್ಯವಾದ ಒಪ್ಪಂದವನ್ನು ಸೃಷ್ಟಿಸಬಹುದು.
- ಮಾದಕ ದ್ರವ್ಯಗಳನ್ನು ಸೇವಿಸಿರುವ ವ್ಯಕ್ತಿಯೊಂದಿಗೆ ನಡೆಸಿರುವ ಒಪ್ಪಂದವನ್ನು ಒಪ್ಪಂದವೆಂದು ಕರೆಯಲು ಸಾಧ್ಯವಿಲ್ಲ.

ಈ ಕೆಳಗಿನ ಆಯ್ಕೆಗಳಿಂದ ಸರಿಯಾದ ಉತ್ತರವನ್ನು ಆರಿಸಿ:

- A, B ಮತ್ತು D ಮಾತ್ರ
- B ಮತ್ತು E ಮಾತ್ರ
- C, D ಮತ್ತು E ಮಾತ್ರ
- A, C ಮತ್ತು D ಮಾತ್ರ

**Options :**

485584135401. 1
485584135402. 2
485584135403. 3
485584135404. 4

**Question Number : 267 Question Id : 48558433852 Question Type : MCQ Option Shuffling : No Is Question Mandatory : No Calculator : None Response Time : N.A Think Time : N.A Minimum Instruction Time : 0**

**Correct Marks : 5 Wrong Marks : 1**

**Question Key Details :**

Key	Value
Comprehension	MCQ

Match List I with List II

LIST I		LIST II	
A.	Novation	I.	Terms of contract of modified
B.	Rescission	II.	New contract is substituted for an old contract.
C.	Waiver	III.	Certain or all terms of contract are cancelled.
D.	Alteration	IV.	Parties to a contract abandon their mutual rights

Choose the correct answer from the options given below:

1. A-II, B-III, C-IV, D-I
2. A-II, B-I, C-III, D-IV
3. A-I, B-III, C-IV, D-II
4. A-III, B-II, C-IV, D-I

**Options :**

485584135405. 1  
485584135406. 2  
485584135407. 3  
485584135408. 4

**Question Number : 267 Question Id : 48558433852 Question Type : MCQ Option Shuffling : No Is Question Mandatory : No Calculator : None Response Time : N.A Think Time : N.A Minimum Instruction Time : 0**

**Correct Marks : 5 Wrong Marks : 1**

**Question Key Details :**

Key	Value
Comprehension	MCQ

ಪಟ್ಟಿ - I ಅನ್ನು ಪಟ್ಟಿ - IIರ ಜೊತೆ ಹೊಂದಿಸಿ.

ಪಟ್ಟಿ - I		ಪಟ್ಟಿ - II	
A.	ನವೀಕರಣ	I.	ಒಪ್ಪಂದದ ನಿಯಮಗಳನ್ನು ಬದಲಿಸಲಾಗಿದೆ
B.	ರದ್ದತಿ	II.	ಹಳೆ ಒಪ್ಪಂದದ ಬದಲಿಗೆ ಹೊಸ ಒಪ್ಪಂದವಾಗಿದೆ
C.	ಮನ್ನಾ	III.	ಒಪ್ಪಂದದ ನಿರ್ದಿಷ್ಟ ಅಥವಾ ಎಲ್ಲ ನಿಯಮಗಳನ್ನು ರದ್ದುಗೊಳಿಸಲಾಗಿದೆ
D.	ತಿದ್ದುಪಡಿ/ಮಾರ್ಪಾಟು	IV.	ಒಂದು ಒಪ್ಪಂದದ ಪಕ್ಷಗಾರರು ತಮ್ಮ ಪರಸ್ಪರ ಹಕ್ಕುಗಳನ್ನು ತ್ಯಜಿಸಿದ್ದಾರೆ

ಈ ಕೆಳಗಿನ ಆಯ್ಕೆಗಳಿಂದ ಸರಿಯಾದ ಉತ್ತರವನ್ನು ಆರಿಸಿ:

1. A-II, B-III, C-IV, D-I
2. A-II, B-I, C-III, D-IV
3. A-I, B-III, C-IV, D-II
4. A-III, B-II, C-IV, D-I

**Options :**

485584135405. 1
485584135406. 2
485584135407. 3
485584135408. 4

**Question Number : 268 Question Id : 48558433853 Question Type : MCQ Option Shuffling : No Is Question Mandatory : No Calculator : None Response Time : N.A Think Time : N.A Minimum Instruction Time : 0**

**Correct Marks : 5 Wrong Marks : 1**

**Question Key Details :**

Key	Value
Comprehension	MCQ

'A' agrees to supply 200 liters of oil to 'B' on 1st February 2023. The contract was entered between the two on 15th January 2023. On 31st January 2023, 'A' informed 'B' that the consignment has been dispatched and would reach 'B' on scheduled date. On 1st Feb 2023, 'B' refused to accept the oil as he did not have sufficient space to store the oil.

What is the remedy available with 'A'?

1. No remedy as the contract is discharged by impossibility of performance
2. No remedy is available as 'A' will get back his goods, so has not suffered any loss
3. 'A' is entitled to receive compensation from 'B' for breach of contract
4. 'A' can wait till 'B' arrange for warehouse

**Options :**

485584135409. 1
485584135410. 2
485584135411. 3



**Question Number : 268 Question Id : 48558433853 Question Type : MCQ Option Shuffling : No Is Question Mandatory : No Calculator : None Response Time : N.A Think Time : N.A Minimum Instruction Time : 0**

**Correct Marks : 5 Wrong Marks : 1**

**Question Key Details :**

Key	Value
Comprehension	MCQ

'A' ಯು 1 ಫೆಬ್ರವರಿ 2023ರಂದು 200 ಲೀಟರ್‌ಗಳಷ್ಟು ಎಣ್ಣೆಯನ್ನು ಪೂರೈಸಲು ಒಪ್ಪಿಕೊಳ್ಳುತ್ತಾನೆ. ಈ ಇಬ್ಬರ ನಡುವೆ 15 ಜನವರಿ 2023ರಂದು ಒಂದು ಒಪ್ಪಂದವನ್ನು ಮಾಡಿಕೊಳ್ಳಲಾಗಿತ್ತು. 31 ಜನವರಿ 2023ರಂದು, ಸರಕನ್ನು ಕಳುಹಿಸಲಾಗಿದೆ ಹಾಗೂ ಅದು ನಿರ್ಧಾರಿತ ದಿನಾಂಕದಂದು 'B' ಯನ್ನು ತಲುಪುತ್ತದೆ ಎಂದು 'A' ಮಾಹಿತಿ ನೀಡುತ್ತಾನೆ. 1 ಫೆಬ್ರವರಿ 2023ರಂದು, ಎಣ್ಣೆಯನ್ನು ದಾಸ್ತಾನು ಮಾಡಲು ಸಾಕಷ್ಟು ಜಾಗವಿಲ್ಲದ ಕಾರಣ ನೀಡಿ, ಎಣ್ಣೆಯನ್ನು ಸ್ವೀಕರಿಸಲು 'B' ಯು ನಿರಾಕರಿಸುತ್ತಾನೆ.

'A'ಗೆ ಲಭ್ಯವಿರುವ ಪರಿಹಾರ ಯಾವುದು?

1. ನೆರವೇರಿಸಲು ಸಾಧ್ಯವಿಲ್ಲದ ಕಾರಣ ಒಪ್ಪಂದವನ್ನು ರದ್ದುಗೊಳಿಸಿದ್ದರಿಂದಾಗಿ ಪರಿಹಾರವಿಲ್ಲ.
2. 'A' ಯು ತನ್ನ ಸರಕನ್ನು ವಾಪಸ್ ಪಡೆಯುವುದರಿಂದ ಮತ್ತು ಅವನು ಯಾವುದೇ ನಷ್ಟ ಅನುಭವಿಸಿಲ್ಲದ ಕಾರಣ ಯಾವುದೇ ಪರಿಹಾರ ಲಭ್ಯವಿಲ್ಲ.
3. ಒಪ್ಪಂದವನ್ನು ಮುರಿದಿರುವುದಕ್ಕಾಗಿ 'B' ಯಿಂದ ಪರಿಹಾರವನ್ನು ಪಡೆಯಲು 'A' ಯು ಅರ್ಹನಾಗಿರುತ್ತಾನೆ.
4. 'B' ಯು ಗೋದಾಮಿನ ವ್ಯವಸ್ಥೆ ಮಾಡಿಕೊಳ್ಳುವ ತನಕ 'A' ಯು ಕಾಯಬಹುದು.

**Options :**

485584135409. 1  
485584135410. 2  
485584135411. 3  
485584135412. 4

**Question Number : 269 Question Id : 48558433854 Question Type : MCQ Option Shuffling : No Is Question Mandatory : No Calculator : None Response Time : N.A Think Time : N.A Minimum Instruction Time : 0**

**Correct Marks : 5 Wrong Marks : 1**

**Question Key Details :**

Key	Value
Comprehension	MCQ

Which of the given statements is NOT correct for the Tribunals as a dispute resolution institution?

1. The 42nd Amendment Act empowered the Parliament to set up tribunals for adjudication of specialised disputes
2. The tribunals are meant to replace the courts as the courts are over burdened with pendency of cases.
3. The decisions of the tribunals could be scrutinised by the division of High Courts
4. Regulations oversee the law and order compliance by the tribunals in the relevant government sector.

**Options :**

485584135413. 1  
485584135414. 2

485584135415. 3

485584135416. 4

**Question Number : 269 Question Id : 48558433854 Question Type : MCQ Option Shuffling : No Is Question Mandatory : No Calculator : None Response Time : N.A Think Time : N.A Minimum Instruction Time : 0**

**Correct Marks : 5 Wrong Marks : 1**

**Question Key Details :**

Key	Value
Comprehension	MCQ

ವಿವಾದವನ್ನು ಪರಿಹರಿಸುವ ಸಂಸ್ಥೆಯಾಗಿ ನ್ಯಾಯಮಂಡಳಿಗಳಿಗೆ ಸಂಬಂಧಿಸಿ ಈ ಕೆಳಗೆ ನೀಡಿರುವ ಹೇಳಿಕೆಗಳಲ್ಲಿ ಯಾವುದು ಸರಿಯಲ್ಲ?

1. 42ನೇ ತಿದ್ದುಪಡಿ ಕಾಯ್ದೆಯು ವಿಶೇಷ ವಿವಾದಗಳನ್ನು ತೀರ್ಮಾನಿಸುವುದಕ್ಕಾಗಿ ನ್ಯಾಯಮಂಡಳಿಗಳನ್ನು ಸ್ಥಾಪಿಸಲು ಸಂಸತ್ತಿಗೆ ಅಧಿಕಾರ ನೀಡುತ್ತದೆ.
2. ಬಾಕಿ ಇರುವ ಪ್ರಕರಣಗಳ ಹೊರೆಯು ನ್ಯಾಯಾಲಯಗಳ ಮೇಲೆ ಅತಿಯಾಗಿರುವುದರಿಂದ ನ್ಯಾಯಮಂಡಳಿಗಳು ನ್ಯಾಯಾಲಯಗಳ ಬದಲಿಗೆ ಕಾರ್ಯ ನಿರ್ವಹಿಸುವ ಉದ್ದೇಶ ಹೊಂದಿವೆ.
3. ನ್ಯಾಯಮಂಡಳಿಗಳ ತೀರ್ಮಾನಗಳನ್ನು ಹೈಕೋರ್ಟ್‌ಗಳ ವಿಭಾಗಗಳು ಪರಿಶೀಲಿಸಬಹುದು.
4. ಸಂಬಂಧಿಸಿದ ಆಡಳಿತ ಕ್ಷೇತ್ರದಲ್ಲಿ, ನ್ಯಾಯಮಂಡಳಿಗಳ ಕಾನೂನು ಮತ್ತು ಶಿಸ್ತು ಪಾಲನೆಯ ಅನುಸರಣೆಗಳನ್ನು ಷರತ್ತುಗಳ ಮೇಲ್ವಿಚಾರಣೆಯಲ್ಲಿ ಮಾಡಲಾಗುತ್ತದೆ.

**Options :**

485584135413. 1

485584135414. 2

485584135415. 3

485584135416. 4

**Question Number : 270 Question Id : 48558433855 Question Type : MCQ Option Shuffling : No Is Question Mandatory : No Calculator : None Response Time : N.A Think Time : N.A Minimum Instruction Time : 0**

**Correct Marks : 5 Wrong Marks : 1**

**Question Key Details :**

Key	Value
Comprehension	MCQ

Choose the correct statements

- A. The 42nd Amendment Act ushered the era of Human Rights in India
- B. The 42nd Amendment Act 1976 added Articles 323 A and 323 B to the Constitution of India
- C. Administrative Tribunals Act 1985 was enacted to cater the needs of SC/ST/OBC people.
- D. In L Chandra Kumar case, the seven judge bench of the Supreme Court held that tribunals would not take away the exclusive jurisdiction of the courts.

Choose the correct answer from the options given below:

- 1. A, B, C only
- 2. B and C only
- 3. B and D only
- 4. C and D only

**Options :**

- 485584135417. 1
- 485584135418. 2
- 485584135419. 3
- 485584135420. 4

**Question Number : 270 Question Id : 48558433855 Question Type : MCQ Option Shuffling : No Is Question Mandatory : No Calculator : None Response Time : N.A Think Time : N.A Minimum Instruction Time : 0**

**Correct Marks : 5 Wrong Marks : 1**

**Question Key Details :**

Key	Value
Comprehension	MCQ

ಸರಿಯಾದ ಹೇಳಿಕೆಗಳನ್ನು ಆಯ್ಕೆ ಮಾಡಿ:

- A. 42ನೇ ತಿದ್ದುಪಡಿಯು ಭಾರತದಲ್ಲಿ ಮಾನವ ಹಕ್ಕುಗಳ ಯುಗದ ಉದಯಕ್ಕೆ ಕಾರಣವಾಯಿತು.
- B. 42ನೇ ತಿದ್ದುಪಡಿ ಕಾಯ್ದೆ 1976 ಭಾರತದ ಸಂವಿಧಾನಕ್ಕೆ ಅನುಚ್ಛೇದ 323 ಎ ಮತ್ತು 323 ಬಿ ಯನ್ನು ಸೇರಿಸಿತು.
- C. ಆಡಳಿತಾತ್ಮಕ ನ್ಯಾಯಮಂಡಳಿಗಳ ಕಾಯ್ದೆ 1985 ಅನ್ನು SC/ST/OBC ವರ್ಗಗಳ ಜನರ ಅಗತ್ಯಗಳನ್ನು ಪೂರೈಸಲು ಜಾರಿ ಮಾಡಲಾಯಿತು.
- D. ಎಲ್. ಚಂದ್ರ ಕುಮಾರ್ ಪ್ರಕರಣದಲ್ಲಿ, ನ್ಯಾಯಾಲಯಗಳ ವಿಶಿಷ್ಟ ನ್ಯಾಯವ್ಯಾಪ್ತಿಯನ್ನು ನ್ಯಾಯಮಂಡಳಿಗಳು ಕಿತ್ತುಕೊಳ್ಳಲು ಸಾಧ್ಯವಿಲ್ಲ ಎಂದು 7 ನ್ಯಾಯಾಧೀಶರಿದ್ದ ಸುಪ್ರೀಂ ಕೋರ್ಟ್ ಪೀಠವು ಅಭಿಪ್ರಾಯಿಸಿದೆ.

ಈ ಕೆಳಗಿನ ಆಯ್ಕೆಗಳಿಂದ ಸರಿಯಾದ ಉತ್ತರವನ್ನು ಆರಿಸಿ:

- 1. A, B ಮತ್ತು C ಮಾತ್ರ
- 2. B ಮತ್ತು C ಮಾತ್ರ
- 3. B ಮತ್ತು D ಮಾತ್ರ
- 4. C ಮತ್ತು D ಮಾತ್ರ

**Options :**

485584135417. 1  
485584135418. 2  
485584135419. 3  
485584135420. 4

**Question Number : 271 Question Id : 48558433856 Question Type : MCQ Option Shuffling : No Is Question Mandatory : No Calculator : None Response Time : N.A Think Time : N.A Minimum Instruction Time : 0**

**Correct Marks : 5 Wrong Marks : 1**

**Question Key Details :**

Key	Value
Comprehension	MCQ

Central Vigilance Commission (CVC) was set up on the recommendation of which Committee:

1. Narsimhan Committee
2. Verma Committee
3. Tiwari Committee
4. Santhanam Committee

**Options :**

485584135421. 1  
485584135422. 2  
485584135423. 3  
485584135424. 4

**Question Number : 271 Question Id : 48558433856 Question Type : MCQ Option Shuffling : No Is Question Mandatory : No Calculator : None Response Time : N.A Think Time : N.A Minimum Instruction Time : 0**

**Correct Marks : 5 Wrong Marks : 1**

**Question Key Details :**

Key	Value
Comprehension	MCQ

ಕೇಂದ್ರೀಯ ಜಾಗೃತಿ ಆಯೋಗ (CVC) ವನ್ನು ಯಾವ ಸಮಿತಿಯ ಶಿಫಾರಸಿನಂತೆ ಸ್ಥಾಪಿಸಲಾಯಿತು?

1. ನರಸಿಂಹನ್ ಸಮಿತಿ
2. ವರ್ಮಾ ಸಮಿತಿ
3. ತಿವಾರಿ ಸಮಿತಿ
4. ಸಂತಾನಂ ಸಮಿತಿ

**Options :**

485584135421. 1  
485584135422. 2  
485584135423. 3  
485584135424. 4

**Question Number : 272 Question Id : 48558433857 Question Type : MCQ Option Shuffling : No Is Question Mandatory : No Calculator : None Response Time : N.A Think Time : N.A Minimum Instruction Time : 0**

**Correct Marks : 5 Wrong Marks : 1**

**Question Key Details :**

Key	Value
Comprehension	MCQ

ADR methods are \_\_\_\_\_ when compared to conventional Judicial Procedure.

1. Speedier, Informal and cheaper
2. Speedier, formal and costly
3. Formal, cheaper and slow
4. Slow, cheaper and informal

**Options :**

485584135425. 1  
485584135426. 2  
485584135427. 3  
485584135428. 4

**Question Number : 272 Question Id : 48558433857 Question Type : MCQ Option Shuffling : No Is Question Mandatory : No Calculator : None Response Time : N.A Think Time : N.A Minimum Instruction Time : 0**

**Correct Marks : 5 Wrong Marks : 1**

**Question Key Details :**

Key	Value
Comprehension	MCQ

ಸಾಂಪ್ರದಾಯಿಕ ನ್ಯಾಯದಾನ ಪ್ರಕ್ರಿಯೆಗೆ ಹೋಲಿಸಿದಾಗ, ADR ವಿಧಾನಗಳು \_\_\_\_\_ ಆಗಿವೆ.

1. ತ್ವರಿತ, ಅನೌಪಚಾರಿಕ ಮತ್ತು ಮಿತವ್ಯಯಕಾರಿ
2. ತ್ವರಿತ, ಔಪಚಾರಿಕ ಮತ್ತು ವೆಚ್ಚದಾಯಕ
3. ಔಪಚಾರಿಕ, ಮಿತವ್ಯಯಕಾರಿ ಮತ್ತು ನಿಧಾನ
4. ನಿಧಾನ, ಮಿತವ್ಯಯಕಾರಿ ಮತ್ತು ಅನೌಪಚಾರಿಕ

**Options :**

485584135425. 1  
485584135426. 2  
485584135427. 3  
485584135428. 4

**Question Number : 273 Question Id : 48558433858 Question Type : MCQ Option Shuffling : No Is Question Mandatory : No Calculator : None Response Time : N.A Think Time : N.A Minimum Instruction Time : 0**

**Correct Marks : 5 Wrong Marks : 1**

**Question Key Details :**

Key	Value
Comprehension	MCQ

The first Lok Adalat was held in India in Junagarh in Gujarat on:-

1. 14 March 1982
2. 15 March 1982
3. 14 May 1982
4. 15 April 1982

**Options :**

485584135429. 1  
485584135430. 2  
485584135431. 3  
485584135432. 4

**Question Number : 273 Question Id : 48558433858 Question Type : MCQ Option Shuffling : No Is Question Mandatory : No Calculator : None Response Time : N.A Think Time : N.A Minimum Instruction Time : 0**

**Correct Marks : 5 Wrong Marks : 1**

**Question Key Details :**

Key	Value
Comprehension	MCQ

ಗುಜರಾತ್ ರಾಜ್ಯದ ಜುನಾಗಢರದಲ್ಲಿ ಭಾರತದ ಮೊದಲ ಲೋಕ್ ಅದಾಲತ್ ನಡೆದಿರುವುದು ಈ ದಿನದಂದು:

1. 14 ಮಾರ್ಚ್ 1982
2. 15 ಮಾರ್ಚ್ 1982
3. 14 ಮೇ 1982
4. 15 ಏಪ್ರಿಲ್ 1982

**Options :**

485584135429. 1  
485584135430. 2  
485584135431. 3  
485584135432. 4

**Question Number : 274 Question Id : 48558433859 Question Type : MCQ Option Shuffling : No Is Question Mandatory : No Calculator : None Response Time : N.A Think Time : N.A Minimum Instruction Time : 0**

**Correct Marks : 5 Wrong Marks : 1**

**Question Key Details :**

Key	Value
Comprehension	MCQ

The Vedic age in India, witnessed specialised tribunal for settling disputes of family, community, tribe, caste and races.

Identify the name of the tribunal.

1. Kula
2. Shreni
3. Puga
4. Panchayat

**Options :**

485584135433. 1  
485584135434. 2  
485584135435. 3  
485584135436. 4

**Question Number : 274 Question Id : 48558433859 Question Type : MCQ Option Shuffling : No Is Question Mandatory : No Calculator : None Response Time : N.A Think Time : N.A Minimum Instruction Time : 0**

**Correct Marks : 5 Wrong Marks : 1**

**Question Key Details :**

Key	Value
Comprehension	MCQ

ಭಾರತದಲ್ಲಿ, ವೇದಕಾಲವು ಕುಟುಂಬ, ಸಮುದಾಯ, ಬುಡಕಟ್ಟು, ಜಾತಿ ಮತ್ತು ಜನಾಂಗಗಳ ವಿವಾದಗಳನ್ನು ಪರಿಹರಿಸಲು ವಿಶೇಷ ನ್ಯಾಯಮಂಡಳಿಯನ್ನು ಸಾಕ್ಷ್ಯೀಕರಿಸಿತ್ತು.

ಆ ನ್ಯಾಯಮಂಡಳಿಯ ಹೆಸರನ್ನು ಗುರುತಿಸಿ.

1. ಕುಲ
2. ಶ್ರೇಣಿ
3. ಪೂಗ
4. ಪಂಚಾಯತ್

**Options :**

485584135433. 1  
485584135434. 2  
485584135435. 3  
485584135436. 4

**Question Number : 275 Question Id : 48558433860 Question Type : MCQ Option Shuffling : No Is Question Mandatory : No Calculator : None Response Time : N.A Think Time : N.A Minimum Instruction Time : 0**

**Correct Marks : 5 Wrong Marks : 1**

**Question Key Details :**

Key	Value
Comprehension	MCQ

According to Preamble of Indian Constitution secures to all its citizen:

- A. Secularism
- B. Justice
- C. Socialism
- D. Fraternity
- E. Sovereignty

Choose the correct answer from the options given below:

- 1. A, B only
- 2. B, D only
- 3. D, E only
- 4. A, C only

**Options :**

- 485584135437. 1
- 485584135438. 2
- 485584135439. 3
- 485584135440. 4

**Question Number : 275 Question Id : 48558433860 Question Type : MCQ Option Shuffling : No Is Question Mandatory : No Calculator : None Response Time : N.A Think Time : N.A Minimum Instruction Time : 0**

**Correct Marks : 5 Wrong Marks : 1**

**Question Key Details :**

Key	Value
Comprehension	MCQ

ಭಾರತದ ಸಂವಿಧಾನದ ಪೀಠಿಕೆಯ ಅನುಸಾರ, ತನ್ನ ಎಲ್ಲ ನಾಗರಿಕರಿಗೆ ಭದ್ರಪಡಿಸುವುದು ಇವುಗಳನ್ನು:

- A. ಜಾತ್ಯತೀತತೆ
- B. ನ್ಯಾಯ
- C. ಸಮಾಜವಾದ
- D. ಭ್ರಾತೃತ್ವ
- E. ಸಾರ್ವಭೌಮತ್ವ

ಈ ಕೆಳಗಿನ ಆಯ್ಕೆಗಳಿಂದ ಸರಿಯಾದ ಉತ್ತರವನ್ನು ಆರಿಸಿ:

- 1. A, B ಮಾತ್ರ
- 2. B, D ಮಾತ್ರ
- 3. D, E ಮಾತ್ರ
- 4. A, C ಮಾತ್ರ

**Options :**

- 485584135437. 1
- 485584135438. 2
- 485584135439. 3
- 485584135440. 4



**Question Number : 276 Question Id : 48558433861 Question Type : MCQ Option Shuffling : No Is Question Mandatory : No Calculator : None Response Time : N.A Think Time : N.A Minimum Instruction Time : 0**  
**Correct Marks : 5 Wrong Marks : 1**  
**Question Key Details :**

Key	Value
Comprehension	MCQ

LAMP (Legislative Assistants to Members of Parliament) fellowship program, provides fellowship to law students interested in public policy. This (LAMP) program is run by:

1. Competition Commission of India
2. Bar Council of India
3. Securities and Exchange Board of India
4. PRS Legislative Research

**Options :**

485584135441. 1  
485584135442. 2  
485584135443. 3  
485584135444. 4

**Question Number : 276 Question Id : 48558433861 Question Type : MCQ Option Shuffling : No Is Question Mandatory : No Calculator : None Response Time : N.A Think Time : N.A Minimum Instruction Time : 0**  
**Correct Marks : 5 Wrong Marks : 1**  
**Question Key Details :**

Key	Value
Comprehension	MCQ

LAMP (ಲೆಜಿಸ್ಲೇಟಿವ್ ಅಸಿಸ್ಟಂಟ್ಸ್ ಟು ಮೆಂಬರ್ಸ್ ಆಫ್ ಪಾರ್ಲಿಮೆಂಟ್) ಫೆಲೋಶಿಪ್ ಕಾರ್ಯಕ್ರಮವು, ಸಾರ್ವಜನಿಕ ನೀತಿಗಳಲ್ಲಿ ಆಸಕ್ತರಾದ ಕಾನೂನು ವಿದ್ಯಾರ್ಥಿಗಳಿಗೆ ಫೆಲೋಶಿಪ್ ನೀಡುತ್ತದೆ. ಈ (LAMP) ಕಾರ್ಯಕ್ರಮ ನಡೆಸುತ್ತಿರುವುದು:

1. ಕಾಂಪಿಟಿಷನ್ ಕಮಿಷನ್ ಆಫ್ ಇಂಡಿಯಾ
2. ಬಾರ್ ಕೌನ್ಸಿಲ್ ಆಫ್ ಇಂಡಿಯಾ
3. ಸೆಕ್ಯೂರಿಟೀಸ್ ಅಂಡ್ ಎಕ್ಸ್‌ಚೇಂಜ್ ಬೋರ್ಡ್ ಆಫ್ ಇಂಡಿಯಾ
4. PRS ಲೆಜಿಸ್ಲೇಟಿವ್ ರಿಸರ್ಚ್

**Options :**

485584135441. 1  
485584135442. 2  
485584135443. 3  
485584135444. 4

**Question Number : 277 Question Id : 48558433862 Question Type : MCQ Option Shuffling : No Is Question Mandatory : No Calculator : None Response Time : N.A Think Time : N.A Minimum Instruction Time : 0**  
**Correct Marks : 5 Wrong Marks : 1**  
**Question Key Details :**

Key	Value
Comprehension	MCQ

In 1987, the first National Law School of India was set up in:

1. Jodhpur
2. Kolkata
3. Bangalore
4. Patna

**Options :**

485584135445. 1  
485584135446. 2  
485584135447. 3  
485584135448. 4

**Question Number : 277 Question Id : 48558433862 Question Type : MCQ Option Shuffling : No Is Question Mandatory : No Calculator : None Response Time : N.A Think Time : N.A Minimum Instruction Time : 0**

**Correct Marks : 5 Wrong Marks : 1**

**Question Key Details :**

Key	Value
Comprehension	MCQ

1987 ರಲ್ಲಿ, ಮೊದಲ ನ್ಯಾಷನಲ್ ಲಾ ಸ್ಕೂಲ್ ಆಫ್ ಇಂಡಿಯಾ ಸ್ಥಾಪನೆಯಾಗಿದ್ದು ಇಲ್ಲಿ:

1. ಜೋಧಪುರ
2. ಕೋಲ್ಕತ್ತಾ
3. ಬೆಂಗಳೂರು
4. ಪಾಟ್ನಾ

**Options :**

485584135445. 1  
485584135446. 2  
485584135447. 3  
485584135448. 4

**Question Number : 278 Question Id : 48558433863 Question Type : MCQ Option Shuffling : No Is Question Mandatory : No Calculator : None Response Time : N.A Think Time : N.A Minimum Instruction Time : 0**

**Correct Marks : 5 Wrong Marks : 1**

**Question Key Details :**

Key	Value
Comprehension	MCQ

Women were included in the legal profession after the enactment of \_\_\_\_\_.

1. Advocates Act, 1961
2. Legal Practitioners (Women) Act, 1923
3. Government of India Act, 1923
4. Legal Practitioners Act, 1846

**Options :**

485584135449. 1  
485584135450. 2  
485584135451. 3  
485584135452. 4

**Question Number : 278 Question Id : 48558433863 Question Type : MCQ Option Shuffling : No Is Question Mandatory : No Calculator : None Response Time : N.A Think Time : N.A Minimum Instruction Time : 0**

**Correct Marks : 5 Wrong Marks : 1**

**Question Key Details :**

Key	Value
Comprehension	MCQ

\_\_\_\_\_ ಜಾರಿಯಾದ ಬಳಿಕ ಕಾನೂನು ವೃತ್ತಿಯಲ್ಲಿ ಮಹಿಳೆಯರನ್ನು ಸೇರಿಸಿಕೊಳ್ಳಲಾಯಿತು.

1. ಅಡ್ವೋಕೇಟ್ಸ್ ಆಕ್ಟ್, 1961
2. ಲೀಗಲ್ ಪ್ರಾಕ್ಟೀಷನರ್ಸ್ (ವಿಮೆನ್) ಆಕ್ಟ್, 1923
3. ಗವರ್ನಮೆಂಟ್ ಆಫ್ ಇಂಡಿಯಾ ಆಕ್ಟ್, 1923
4. ಲೀಗಲ್ ಪ್ರಾಕ್ಟೀಷನರ್ಸ್ ಆಕ್ಟ್, 1846

**Options :**

485584135449. 1  
485584135450. 2  
485584135451. 3  
485584135452. 4

**Question Number : 279 Question Id : 48558433864 Question Type : MCQ Option Shuffling : No Is Question Mandatory : No Calculator : None Response Time : N.A Think Time : N.A Minimum Instruction Time : 0**

**Correct Marks : 5 Wrong Marks : 1**

**Question Key Details :**

Key	Value
Comprehension	MCQ

Arrange the below mentioned incidents in the correct sequence leading to liberalization of the legal profession:

- A. Madras HC's decision permitting lawyers to practice in India on a 'Fly in and fly out' basis
- B. Amendment in Advocate Act for preparing a level playing field for Indian Lawyers
- C. Signing of WTO Treaty by Government of India
- D. Judgment of Bombay HC that foreign law firms could not be permitted to set up liaison office in India
- E. Resolution passed by Bar Council of India opposing the opening up of legal profession to foreign lawyers

Choose the correct answer from the options given below:

- 1. C - B - E - D - A
- 2. A - C - D - E - B
- 3. D - B - E - C - A
- 4. A - C - B - E - D

**Options :**

- 485584135453. 1
- 485584135454. 2
- 485584135455. 3
- 485584135456. 4

**Question Number : 279 Question Id : 48558433864 Question Type : MCQ Option Shuffling : No Is Question Mandatory : No Calculator : None Response Time : N.A Think Time : N.A Minimum Instruction Time : 0**

**Correct Marks : 5 Wrong Marks : 1**

**Question Key Details :**

Key	Value
Comprehension	MCQ

ವಕೀಲಿ ವೃತ್ತಿಯ ಉದಾರೀಕರಣಕ್ಕೆ ಕಾರಣವಾದ ಘಟನೆಗಳ ಸರಿಯಾದ ಕಾಲಾನುಕ್ರಮದಲ್ಲಿ ಈ ಕೆಳಗಿನವುಗಳನ್ನು ಜೋಡಿಸಿ:

- A. 'ಫ್ಲೈ ಇನ್ ಫ್ಲೈ ಔಟ್' ಆಧಾರದಲ್ಲಿ ಭಾರತದಲ್ಲಿ ವೃತ್ತಿ ನಡೆಸಲು ವಕೀಲರಿಗೆ ಅನುಮತಿ ನೀಡುವ ಮದ್ರಾಸ್ HC ಯ ನಿರ್ಧಾರ
- B. ಭಾರತೀಯ ವಕೀಲರಿಗೆ ಸಮಾನ ಅವಕಾಶಗಳನ್ನು ಒದಗಿಸುವ ಸಿದ್ಧತೆಯಾಗಿ ಅಡ್ವೋಕೇಟ್ ಆಕ್ಟಿಗೆ ತಿದ್ದುಪಡಿ
- C. ಭಾರತ ಸರ್ಕಾರದಿಂದ WTO ಒಪ್ಪಂದಕ್ಕೆ ಸಹಿ
- D. ವಿದೇಶಿ ಕಾನೂನು ಸಂಸ್ಥೆಗಳು ಭಾರತದಲ್ಲಿ ತಮ್ಮ ಅಧೀನ ಸಂಸ್ಥೆಗಳನ್ನು ಸ್ಥಾಪಿಸುವಂತಿಲ್ಲ ಎಂಬ ಬಾಂಬೆ HC ತೀರ್ಪು
- E. ವಿದೇಶಿ ವಕೀಲರು ಕಾನೂನು ವೃತ್ತಿಯನ್ನು ಆರಂಭಿಸುವುದನ್ನು ವಿರೋಧಿಸಿ ಬಾರ್ ಕೌನ್ಸಿಲ್ ಆಫ್ ಇಂಡಿಯಾ ಅಂಗೀಕರಿಸಿದ ನಿರ್ಣಯ

ಈ ಕೆಳಗಿನ ಆಯ್ಕೆಗಳಿಂದ ಸರಿಯಾದ ಉತ್ತರವನ್ನು ಆರಿಸಿ:

1. C - B - E - D - A
2. A - C - D - E - B
3. D - B - E - C - A
4. A - C - B - E - D

**Options :**

485584135453. 1  
485584135454. 2  
485584135455. 3  
485584135456. 4

**Question Number : 280 Question Id : 48558433865 Question Type : MCQ Option Shuffling : No Is Question Mandatory : No Calculator : None Response Time : N.A Think Time : N.A Minimum Instruction Time : 0**

**Correct Marks : 5 Wrong Marks : 1**

**Question Key Details :**

Key	Value
Comprehension	MCQ

Match List I with List II

LIST I Countries		LIST II Regulation/Restriction on Advertisement	
A.	USA	I.	Bar Council of India Rules
B.	Malayasia	II.	Model Rules of Professional Conduct
C.	India	III.	Legal Profession (Publicity Rules) 2001
D.	Hongkong	IV.	Forbidden to advertise on television, radio and in cinemas

Choose the correct answer from the options given below:

1. A-I, B-II, C-IV, D-III
2. A-II, B-III, C-I, D-IV
3. A-III, B-IV, C-II, D-I
4. A-IV, B-I, C-III, D-II

**Options :**

485584135457. 1  
485584135458. 2  
485584135459. 3  
485584135460. 4

**Question Number : 280 Question Id : 48558433865 Question Type : MCQ Option Shuffling : No Is Question Mandatory : No Calculator : None Response Time : N.A Think Time : N.A Minimum Instruction Time : 0**

**Correct Marks : 5 Wrong Marks : 1**

**Question Key Details :**

Key	Value
Comprehension	MCQ

ಪಟ್ಟಿ - I ಅನ್ನು ಪಟ್ಟಿ - IIರ ಜೊತೆ ಹೊಂದಿಸಿ.

ಪಟ್ಟಿ-I ದೇಶಗಳು		ಪಟ್ಟಿ - II ಜಾಹೀರಾತುಗಳ ಮೇಲೆ ಷರತ್ತು/ನಿರ್ಬಂಧ	
A.	USA	I.	ಬಾರ್ ಕೌನ್ಸಿಲ್ ಆಫ್ ಇಂಡಿಯಾ ನಿಯಮಗಳು
B.	ಮಲೇಷಿಯಾ	II.	ವೃತ್ತಿ ಸನ್ನಿಹಿತತೆಯ ಮಾದರಿ ನಿಯಮಗಳು
C.	ಭಾರತ	III.	ವಕೀಲಿ ವೃತ್ತಿ (ಪ್ರಚಾರ ನಿಯಮಗಳು) 2001
D.	ಹಾಂಗ್‌ಕಾಂಗ್	IV.	ಟೆಲಿವಿಷನ್, ರೇಡಿಯೋ ಮತ್ತು ಚಲನಚಿತ್ರಗಳಲ್ಲಿ ಜಾಹೀರಾತು ನೀಡಲು ತಡೆ

ಈ ಕೆಳಗಿನ ಆಯ್ಕೆಗಳಿಂದ ಸರಿಯಾದ ಉತ್ತರವನ್ನು ಆರಿಸಿ:

1. A-I, B-II, C-IV, D-III
2. A-II, B-III, C-I, D-IV
3. A-III, B-IV, C-II, D-I
4. A-IV, B-I, C-III, D-II

**Options :**

485584135457. 1
485584135458. 2
485584135459. 3
485584135460. 4

**Question Number : 281 Question Id : 48558433866 Question Type : MCQ Option Shuffling : No Is Question Mandatory : No Calculator : None Response Time : N.A Think Time : N.A Minimum Instruction Time : 0**

**Correct Marks : 5 Wrong Marks : 1**

**Question Key Details :**

Key	Value
Comprehension	MCQ

Who among the following are allowed to practice law in India after the Advocates Act 1961?

- A. Barristers
- B. Advocates
- C. Advocate on Record
- D. Attorney General of India
- E. Pleaders

Choose the correct answer from the options given below:

1. A, B only
2. B, C only
3. C, D only
4. D, E only

**Options :**

485584135461. 1  
485584135462. 2  
485584135463. 3  
485584135464. 4

**Question Number : 281 Question Id : 48558433866 Question Type : MCQ Option Shuffling : No Is Question Mandatory : No Calculator : None Response Time : N.A Think Time : N.A Minimum Instruction Time : 0**

**Correct Marks : 5 Wrong Marks : 1**

**Question Key Details :**

Key	Value
Comprehension	MCQ

ಅಡ್ವೋಕೇಟ್ಸ್ ಆಕ್ಟ್, 1960ರ ಬಳಿಕ ಈ ಕೆಳಗಿನವರಲ್ಲಿ ಯಾರಿಗೆ ಭಾರತದಲ್ಲಿ ವಕೀಲಿ ವೃತ್ತಿಯನ್ನು ನಡೆಸಲು ಅವಕಾಶ ನೀಡಲಾಯಿತು?

- A. ಬ್ಯಾರಿಸ್ಟರ್‌ಗಳು
- B. ಅಡ್ವೋಕೇಟ್‌ಗಳು
- C. ಅಡ್ವೋಕೇಟ್ ಆನ್ ರೆಕಾರ್ಡ್
- D. ಭಾರತದ ಆಟಾರ್ನಿ ಜನರಲ್
- E. ಪ್ಲೀಡರ್‌ಗಳು

ಈ ಕೆಳಗಿನ ಆಯ್ಕೆಗಳಿಂದ ಸರಿಯಾದ ಉತ್ತರವನ್ನು ಆರಿಸಿ:

- 1. A, B ಮಾತ್ರ
- 2. B, C ಮಾತ್ರ
- 3. C, D ಮಾತ್ರ
- 4. D, E ಮಾತ್ರ

**Options :**

485584135461. 1  
485584135462. 2  
485584135463. 3  
485584135464. 4

**Question Number : 282 Question Id : 48558433867 Question Type : MCQ Option Shuffling : No Is Question Mandatory : No Calculator : None Response Time : N.A Think Time : N.A Minimum Instruction Time : 0**

**Correct Marks : 5 Wrong Marks : 1**

**Question Key Details :**

Key	Value
Comprehension	MCQ



Match List I with List II

LIST I		LIST II	
A.	14th Law Commission Report	I.	India became obliged to introduce free legal aid in domestic legislation
B.	Committee on Judicature	II.	Lok Adalat to be setup to promote free legal Aid
C.	Legal Services Authorities Act, 1987	III.	Promoted the idea of free Legal Aid
D.	Signing of ICCPR in 1976	IV.	Framework to provide free Legal aid prepared

Choose the correct answer from the options given below:

1. A-IV, B-I, C-III, D-II
2. A-I, B-II, C-IV, D-III
3. A-II, B-III, C-I, D-IV
4. A-III, B-IV, C-II, D-I

**Options :**

485584135465. 1  
485584135466. 2  
485584135467. 3  
485584135468. 4

**Question Number : 282 Question Id : 48558433867 Question Type : MCQ Option Shuffling : No Is Question Mandatory : No Calculator : None Response Time : N.A Think Time : N.A Minimum Instruction Time : 0**

**Correct Marks : 5 Wrong Marks : 1**

**Question Key Details :**

Key	Value
Comprehension	MCQ

ಅಡ್ವೋಕೇಟ್ಸ್ ಆಕ್ಟ್, 1960ರ ಬಳಿಕ ಈ ಕೆಳಗಿನವರಲ್ಲಿ ಯಾರಿಗೆ ಭಾರತದಲ್ಲಿ ವಕೀಲಿ ವೃತ್ತಿಯನ್ನು ನಡೆಸಲು ಅವಕಾಶ ನೀಡಲಾಯಿತು?

- A. ಬ್ಯಾರಿಸ್ಟರ್‌ಗಳು
- B. ಅಡ್ವೋಕೇಟ್‌ಗಳು
- C. ಅಡ್ವೋಕೇಟ್ ಆನ್ ರೆಕಾರ್ಡ್
- D. ಭಾರತದ ಆಟಾರ್ನಿ ಜನರಲ್
- E. ಪ್ಲೀಡರ್‌ಗಳು

ಈ ಕೆಳಗಿನ ಆಯ್ಕೆಗಳಿಂದ ಸರಿಯಾದ ಉತ್ತರವನ್ನು ಆರಿಸಿ:

1. A, B ಮಾತ್ರ
2. B, C ಮಾತ್ರ
3. C, D ಮಾತ್ರ
4. D, E ಮಾತ್ರ

**Options :**

- 485584135465. 1
- 485584135466. 2
- 485584135467. 3
- 485584135468. 4

**Question Number : 283 Question Id : 48558433868 Question Type : MCQ Option Shuffling : No Is Question Mandatory : No Calculator : None Response Time : N.A Think Time : N.A Minimum Instruction Time : 0**

**Correct Marks : 5 Wrong Marks : 1**

**Question Key Details :**

Key	Value
Comprehension	MCQ

Which international organisation was initially originated as International Bank for Reconstruction and Development (IBRD)?

1. International Monetary Fund
2. World Bank
3. Reserve Bank
4. Monetary Bank of world

**Options :**

- 485584135469. 1
- 485584135470. 2
- 485584135471. 3
- 485584135472. 4

**Question Number : 283 Question Id : 48558433868 Question Type : MCQ Option Shuffling : No Is Question Mandatory : No Calculator : None Response Time : N.A Think Time : N.A Minimum Instruction Time : 0**

**Correct Marks : 5 Wrong Marks : 1**

**Question Key Details :**

Key	Value
Comprehension	MCQ

ಯಾವ ಅಂತಾರಾಷ್ಟ್ರೀಯ ಸಂಸ್ಥೆಯು ಮೂಲತಃ ಇಂಟರ್‌ನ್ಯಾಷನಲ್ ಬ್ಯಾಂಕ್ ಫಾರ್ ರಿಕನ್‌ಸ್ಟ್ರಕ್ಷನ್ ಅಂಡ್ ಡೆವಲಪ್‌ಮೆಂಟ್ (IBRD) ಆಗಿ ಆರಂಭವಾಯಿತು?

1. ಇಂಟರ್‌ನ್ಯಾಷನಲ್ ಮಾನಿಟರಿ ಫಂಡ್
2. ವಿಶ್ವ ಬ್ಯಾಂಕ್
3. ರಿಸರ್ವ್ ಬ್ಯಾಂಕ್
4. ಮಾನಿಟರಿ ಬ್ಯಾಂಕ್ ಆಫ್ ವರ್ಲ್ಡ್

**Options :**

- 485584135469. 1
- 485584135470. 2
- 485584135471. 3
- 485584135472. 4

Question Number : 284 Question Id : 48558433869 Question Type : MCQ Option Shuffling : No Is Question Mandatory : No Calculator : None Response Time : N.A Think Time : N.A Minimum Instruction Time : 0

Correct Marks : 5 Wrong Marks : 1

Question Key Details :

Key	Value
Comprehension	MCQ

Arrange the following in order of establishment

- A. ILO
- B. UNESCO
- C. IMF
- D. WHO

Choose the correct answer from the options given below:

- 1. A - C - B - D
- 2. D - A - B - C
- 3. C - A - B - D
- 4. A - B - C - D

Options :

- 485584135473. 1
- 485584135474. 2
- 485584135475. 3
- 485584135476. 4

Question Number : 284 Question Id : 48558433869 Question Type : MCQ Option Shuffling : No Is Question Mandatory : No Calculator : None Response Time : N.A Think Time : N.A Minimum Instruction Time : 0

Correct Marks : 5 Wrong Marks : 1

Question Key Details :

Key	Value
Comprehension	MCQ

ಸ್ವಾಪನೆಯಾದ ಕಾಲಾನುಕ್ರಮದಲ್ಲಿ ಈ ಕೆಳಗಿನವುಗಳನ್ನು ಜೋಡಿಸಿ:

- A. ILO
- B. UNESCO
- C. IMF
- D. WHO

ಈ ಕೆಳಗಿನ ಆಯ್ಕೆಗಳಿಂದ ಸರಿಯಾದ ಉತ್ತರವನ್ನು ಆರಿಸಿ:

- 1. A - C - B - D
- 2. D - A - B - C
- 3. C - A - B - D
- 4. A - B - C - D

Options :

- 485584135473. 1

485584135474. 2

485584135475. 3

485584135476. 4

**Question Number : 285 Question Id : 48558433870 Question Type : MCQ Option Shuffling : No Is Question Mandatory : No Calculator : None Response Time : N.A Think Time : N.A Minimum Instruction Time : 0**

**Correct Marks : 5 Wrong Marks : 1**

**Question Key Details :**

Key	Value
Comprehension	MCQ

Which of the following is not a method by which a state may express its consent to be bound by a particular treaty:-

1. Consent by signature
2. Consent by exchange of instruments
3. Consent by verbal assurance of Head of State
4. Consent by ratification

**Options :**

485584135477. 1

485584135478. 2

485584135479. 3

485584135480. 4

**Question Number : 285 Question Id : 48558433870 Question Type : MCQ Option Shuffling : No Is Question Mandatory : No Calculator : None Response Time : N.A Think Time : N.A Minimum Instruction Time : 0**

**Correct Marks : 5 Wrong Marks : 1**

**Question Key Details :**

Key	Value
Comprehension	MCQ

ಒಂದು ನಿರ್ದಿಷ್ಟ ಒಪ್ಪಂದಕ್ಕೆ ಒಳಪಡಲು ಸರ್ಕಾರವು ಒಪ್ಪಿಗೆಯನ್ನು ಸೂಚಿಸಲು ಈ ಕೆಳಗಿನ ಯಾವುದು ಒಂದು ವಿಧಾನವಲ್ಲ?

1. ಸಹಿಯ ಮೂಲಕ ಒಪ್ಪಿಗೆ
2. ದಾಖಲೆಗಳ ವಿನಿಯಮದ ಮೂಲಕ ಒಪ್ಪಿಗೆ
3. ಸರ್ಕಾರದ ಮುಖ್ಯಸ್ಥರ ಮೌಖಿಕ ಭರವಸೆಯ ಮೂಲಕ ಒಪ್ಪಿಗೆ
4. ಅನುಮೋದನೆಯ ಮೂಲಕ ಒಪ್ಪಿಗೆ

**Options :**

485584135477. 1

485584135478. 2

485584135479. 3

485584135480. 4

**Question Number : 286 Question Id : 48558433871 Question Type : MCQ Option Shuffling : No Is Question Mandatory : No Calculator : None Response Time : N.A Think Time : N.A Minimum Instruction Time : 0**

Correct Marks : 5 Wrong Marks : 1

Question Key Details :

Key	Value
Comprehension	MCQ

Which of the following is a subsidiary source of International law according to Article 38(1) of ICJ statute?

1. International Conventions
2. International Customs
3. General Principles of International law
4. Teachings of most highly qualified Publicists

Options :

485584135481. 1  
485584135482. 2  
485584135483. 3  
485584135484. 4

Question Number : 286 Question Id : 48558433871 Question Type : MCQ Option Shuffling : No Is Question Mandatory : No Calculator : None Response Time : N.A Think Time : N.A Minimum Instruction Time : 0

Correct Marks : 5 Wrong Marks : 1

Question Key Details :

Key	Value
Comprehension	MCQ

ICJ ಶಾಸನದ ಅನುಚ್ಛೇದ 38(1)ರ ಪ್ರಕಾರ ಈ ಕೆಳಗಿನವುಗಳಲ್ಲಿ ಯಾವುದು ಅಂತಾರಾಷ್ಟ್ರೀಯ ಕಾನೂನಿನ ಅಂಗಸಂಸ್ಥೆಯ ಮೂಲವಾಗಿದೆ?

1. ಅಂತಾರಾಷ್ಟ್ರೀಯ ಸಮ್ಮೇಳನಗಳು
2. ಅಂತಾರಾಷ್ಟ್ರೀಯ ಪದ್ಧತಿಗಳು
3. ಅಂತಾರಾಷ್ಟ್ರೀಯ ಕಾನೂನಿನ ಸಾಮಾನ್ಯ ನಿಯಮಗಳು
4. ಹೆಚ್ಚು ಅರ್ಹರಾದ ಪ್ರಚಾರಕರ ಬೋಧನೆಗಳು

Options :

485584135481. 1  
485584135482. 2  
485584135483. 3  
485584135484. 4

Question Number : 287 Question Id : 48558433872 Question Type : MCQ Option Shuffling : No Is Question Mandatory : No Calculator : None Response Time : N.A Think Time : N.A Minimum Instruction Time : 0

Correct Marks : 5 Wrong Marks : 1

Question Key Details :

Key	Value
Comprehension	MCQ

Choose the correct chronological order of the following

- A. The Hague conference focuses on wide array of aspects of private law.
- B. India adopted the UNCITRAL.
- C. ILO was set up after the war, as a part of Treaty of Versailles
- D. Human Rights Council is working for human rights issues.

Choose the correct answer from the options given below:

- 1. B, C, A, D
- 2. A, C, B, D
- 3. D, A, B, C
- 4. B, D, A, C

**Options :**

- 485584135485. 1
- 485584135486. 2
- 485584135487. 3
- 485584135488. 4

**Question Number : 287 Question Id : 48558433872 Question Type : MCQ Option Shuffling : No Is Question Mandatory : No Calculator : None Response Time : N.A Think Time : N.A Minimum Instruction Time : 0**

**Correct Marks : 5 Wrong Marks : 1**

**Question Key Details :**

Key	Value
Comprehension	MCQ

ಈ ಕೆಳಗಿನವುಗಳನ್ನು ಸರಿಯಾದ ಕಾಲಾನುಕ್ರಮದಲ್ಲಿ ಜೋಡಿಸಿ:

- A. ಹೇಗ್ ಸಮ್ಮೇಳನವು ಖಾಸಗಿ ಕಾನೂನಿನ ವಿಸ್ತಾರವಾದ ಅಂಶಗಳ ಮೇಲೆ ಗಮನಹರಿಸಿತು.
- B. ಭಾರತವು UNCITRAL ಅನ್ನು ಅಳವಡಿಸಿಕೊಂಡಿತು.
- C. ILO ಅನ್ನು ಯುದ್ಧದ ಬಳಿಕ ವರ್ಸೈಲ್ಸ್‌ನ ಒಪ್ಪಂದದ ಭಾಗವಾಗಿ ಸ್ಥಾಪಿಸಲಾಯಿತು.
- D. ಮಾನವ ಹಕ್ಕುಗಳ ಪರಿಷತ್ತು ಮಾನವ ಹಕ್ಕುಗಳಿಗೆ ಸಂಬಂಧಿಸಿದ ಸಮಸ್ಯೆಗಳ ಪರಿಹಾರಕ್ಕೆ ಶ್ರಮಿಸುತ್ತಿದೆ..

ಈ ಕೆಳಗಿನ ಆಯ್ಕೆಗಳಿಂದ ಸರಿಯಾದ ಉತ್ತರವನ್ನು ಆರಿಸಿ:

- 1. B, C, A, D
- 2. A, C, B, D
- 3. D, A, B, C
- 4. B, D, A, C

**Options :**

- 485584135485. 1
- 485584135486. 2
- 485584135487. 3
- 485584135488. 4

Question Number : 288 Question Id : 48558433873 Question Type : MCQ Option Shuffling : No Is Question Mandatory : No Calculator : None Response Time : N.A Think Time : N.A Minimum Instruction Time : 0

Correct Marks : 5 Wrong Marks : 1

Question Key Details :

Key	Value
Comprehension	MCQ

Article 59 of the statute of the ICJ states that except on parties to the dispute the decision of ICJ is

1. Not binding
2. binding on all states
3. based on consent of states
4. binding on Security Council

Options :

485584135489. 1  
485584135490. 2  
485584135491. 3  
485584135492. 4

Question Number : 288 Question Id : 48558433873 Question Type : MCQ Option Shuffling : No Is Question Mandatory : No Calculator : None Response Time : N.A Think Time : N.A Minimum Instruction Time : 0

Correct Marks : 5 Wrong Marks : 1

Question Key Details :

Key	Value
Comprehension	MCQ

ICJ ಶಾಸನದ ಅನುಚ್ಛೇದ 59 ಹೇಳುವಂತೆ, ವಿವಾದದಲ್ಲಿರುವ ಪಕ್ಷಗಳ ಹೊರತಾಗಿ ICJ ಯ ತೀರ್ಮಾನವು:

1. ಸಂಬಂಧವಿಲ್ಲ
2. ಎಲ್ಲ ರಾಜ್ಯಗಳಿಗೂ ಸಂಬಂಧಿಸಿದೆ
3. ರಾಜ್ಯಗಳ ಒಪ್ಪಿಗೆಯನ್ನು ಆಧರಿಸಿದೆ
4. ಭದ್ರತಾ ಪರಿಷತ್ತಿಗೆ ಸಂಬಂಧಿಸಿದೆ

Options :

485584135489. 1  
485584135490. 2  
485584135491. 3  
485584135492. 4

Question Number : 289 Question Id : 48558433874 Question Type : MCQ Option Shuffling : No Is Question Mandatory : No Calculator : None Response Time : N.A Think Time : N.A Minimum Instruction Time : 0

Correct Marks : 5 Wrong Marks : 1

Question Key Details :

Key	Value
Comprehension	MCQ

Match List I with List II

LIST I		LIST II	
A.	<i>Injuria Sine Damnum</i>	I.	Where there is right there is remedy
B.	<i>Bona fide</i>	II.	Let the buyer beware
C.	<i>Caveat Emptor</i>	III.	Injury without damage
D.	<i>Ubi Jus Ibi Remedium</i>	IV.	Good faith

Choose the correct answer from the options given below:

1. A-III, B-IV, C-II, D-I
2. A-I, B-II, C-III, D-IV
3. A-IV, B-III, C-I, D-II
4. A-I, B-IV, C-II, D-III

**Options :**

485584135493. 1  
 485584135494. 2  
 485584135495. 3  
 485584135496. 4

**Question Number : 289 Question Id : 48558433874 Question Type : MCQ Option Shuffling : No Is Question Mandatory : No Calculator : None Response Time : N.A Think Time : N.A Minimum Instruction Time : 0**

**Correct Marks : 5 Wrong Marks : 1**

**Question Key Details :**

Key	Value
Comprehension	MCQ

ಪಟ್ಟಿ - I ಅನ್ನು ಪಟ್ಟಿ - IIರ ಜೊತೆ ಹೊಂದಿಸಿ.

ಪಟ್ಟಿ - I		ಪಟ್ಟಿ - II	
A.	ಇಂಜುರಿಯಾ ಸೈನ್ ಡಾಮ್‌ನಮ್	I.	ಎಲ್ಲಿ ಹಕ್ಕು ಇದೆಯೋ ಅಲ್ಲಿ ಪರಿಹಾರವೂ ಇದೆ
B.	ಬೋನಾ ಫೈಡೆ	II.	ಗ್ರಾಹಕ ಜಾಗೃತನಾಗಿರಲಿ
C.	ಕೇವಿಯೆಂಟ್ ಎಂಪ್ಟರ್	III.	ಹಾನಿಯಿಲ್ಲದೆ ಗಾಯ
D.	ಉಬಿ ಜುಸ್ ಇಬಿ ರಿಮೆಡಿಯಂ	IV.	ಸದಾಶಯ

ಈ ಕೆಳಗಿನ ಆಯ್ಕೆಗಳಿಂದ ಸರಿಯಾದ ಉತ್ತರವನ್ನು ಆರಿಸಿ:

1. A-III, B-IV, C-II, D-I
2. A-I, B-II, C-III, D-IV
3. A-IV, B-III, C-I, D-II
4. A-I, B-IV, C-II, D-III

**Options :**

485584135493. 1  
 485584135494. 2  
 485584135495. 3



485584135496. 4

**Question Number : 290 Question Id : 48558433875 Question Type : MCQ Option Shuffling : No Is Question Mandatory : No Calculator : None Response Time : N.A Think Time : N.A Minimum Instruction Time : 0**

**Correct Marks : 5 Wrong Marks : 1**

**Question Key Details :**

Key	Value
Comprehension	MCQ

What is the meaning of the legal Maxim '*Ignorantia Facti Excusat- Ignorantia Juris Non Excusat*'

1. Ignorance of law is an excuse
2. Ignorance of law of fact is not an excuse
3. Ignorance of fact is an excuse but ignorance of law is not an excuse
4. Ignorance of fact is not an excuse

**Options :**

485584135497. 1  
485584135498. 2  
485584135499. 3  
485584135500. 4

**Question Number : 290 Question Id : 48558433875 Question Type : MCQ Option Shuffling : No Is Question Mandatory : No Calculator : None Response Time : N.A Think Time : N.A Minimum Instruction Time : 0**

**Correct Marks : 5 Wrong Marks : 1**

**Question Key Details :**

Key	Value
Comprehension	MCQ

ಕಾನೂನು ನಿಯಮ '*Ignorantia Facti Excusat- Ignorantia Juris Non Excusat*' ದ ಅರ್ಥವೇನು?

1. ಕಾನೂನಿನ ಅಜ್ಞಾನವು ಒಂದು ವಿನಾಯಿತಿಯಾಗಿದೆ
2. ಕಾನೂನಿನ ತಥ್ಯದ ಅಜ್ಞಾನವು ವಿನಾಯಿತಿ ಅಲ್ಲ
3. ತಥ್ಯದ ಅಜ್ಞಾನವು ಒಂದು ವಿನಾಯಿತಿಯಾಗಿದೆ ಆದರೆ, ಕಾನೂನಿನ ಅಜ್ಞಾನವು ವಿನಾಯಿತಿಯಲ್ಲ
4. ತಥ್ಯದ ಅಜ್ಞಾನವು ವಿನಾಯಿತಿ ಅಲ್ಲ

**Options :**

485584135497. 1  
485584135498. 2  
485584135499. 3  
485584135500. 4

**Sub-Section Number :**

2

**Sub-Section Id :**

4855842432

**Question Shuffling Allowed :**

No

**Is Section Default? :**

null

**Question Number : 291 Question Id : 48558433876 Question Type : MCQ Option Shuffling : No Is Question Mandatory : No Calculator : None Response Time : N.A Think Time : N.A Minimum Instruction Time : 0**

Correct Marks : 5 Wrong Marks : 1

Question Key Details :

Key	Value
Comprehension	Comp1

Read the passage and answer the following questions:-

"In 2010, the National Legal Services Authority of India (NALSA) adopted the National Legal Service Authority (Free and Competent Legal Services) Regulations in exercise of its power under Section 29 of Legal Service Authorities Act, 1987. The regulations are applicable to Legal Service Committees of the Supreme Court, High Courts, the States, districts and taluks. The legal service institution is vested with authority to invite applications from legal practitioners with requisite experience to indicate the type of cases they are entrusted with."

To be part of panel of lawyers to provide legal aid, the practioner should have

1. 3 or more years experience at bar
2. less than 3 years experience at bar
3. 5 years experience at bar
4. 10 years experience at bar

Options :

485584135501. 1  
485584135502. 2  
485584135503. 3  
485584135504. 4

Question Number : 291 Question Id : 48558433876 Question Type : MCQ Option Shuffling : No Is Question Mandatory : No Calculator : None Response Time : N.A Think Time : N.A Minimum Instruction Time : 0

Correct Marks : 5 Wrong Marks : 1

Question Key Details :

Key	Value
Comprehension	Comp1

ಈ ಗದ್ಯಭಾಗವನ್ನು ಓದಿ ಮತ್ತು ಕೆಳಗಿನ ಪ್ರಶ್ನೆಗಳಿಗೆ ಉತ್ತರಿಸಿ:-

"2010ರಲ್ಲಿ, ಭಾರತದ ರಾಷ್ಟ್ರೀಯ ಕಾನೂನು ಸೇವೆಗಳ ಪ್ರಾಧಿಕಾರ (NALSA)ವು ತನ್ನ ಅಧಿಕಾರವನ್ನು ಬಳಸಲು ಕಾನೂನು ಸೇವೆಗಳ ಪ್ರಾಧಿಕಾರ ಕಾಯ್ದೆ, 1987ರ ವಿಭಾಗ 20ರ ಅಡಿಯಲ್ಲಿ, ರಾಷ್ಟ್ರೀಯ ಕಾನೂನು ಸೇವೆಗಳ ಪ್ರಾಧಿಕಾರ (ಉಚಿತ ಮತ್ತು ಸಕ್ಷಮ ಕಾನೂನು ಸೇವೆಗಳು) ನಿಯಮಗಳನ್ನು ಅಳವಡಿಸಿಕೊಂಡಿತು. ಈ ನಿಬಂಧನೆಗಳು ಸುಪ್ರೀಂ ಕೋರ್ಟ್, ಹೈಕೋರ್ಟ್, ಸರ್ಕಾರಗಳು, ಜಿಲ್ಲೆಗಳು ಮತ್ತು ತಾಲೂಕುಗಳಿಗೆ ಅನ್ವಯವಾಗುತ್ತವೆ. ಕಾನೂನು ಸೇವಾ ಸಂಸ್ಥೆಗಳು ಅಗತ್ಯ ಅನುಭವವನ್ನು ಹೊಂದಿರುವ ಕಾನೂನು ವೃತ್ತಿಪರರಿಂದ ಅರ್ಜಿಗಳನ್ನು ಆಹ್ವಾನಿಸಲು ಮತ್ತು ಅವರಿಗೆ ವಹಿಸಿದ ಪ್ರಕರಣಗಳ ಬಗ್ಗೆಯನ್ನು ಸೂಚಿಸಲು ಅಧಿಕಾರವನ್ನು ಹೊಂದಿರುತ್ತವೆ."

ಕಾನೂನು ನೆರವು ಒದಗಿಸಲು ವಕೀಲರ ಪ್ಯಾನೆಲ್‌ನ ಭಾಗವಾಗಲು, ವೃತ್ತಿದಾರರು ಹೊಂದಿರಬೇಕು:

1. ಬಾರ್‌ನಲ್ಲಿ 3 ಅಥವಾ ಹೆಚ್ಚು ವರ್ಷಗಳ ಅನುಭವ
2. ಬಾರ್‌ನಲ್ಲಿ 3 ವರ್ಷಗಳಿಗಿಂತ ಕಡಿಮೆ ಅನುಭವ
3. ಬಾರ್‌ನಲ್ಲಿ 5 ವರ್ಷಗಳ ಅನುಭವ
4. ಬಾರ್‌ನಲ್ಲಿ 10 ವರ್ಷಗಳ ಅನುಭವ

**Options :**

485584135501. 1  
485584135502. 2  
485584135503. 3  
485584135504. 4

**Question Number : 292 Question Id : 48558433877 Question Type : MCQ Option Shuffling : No Is Question Mandatory : No Calculator : None Response Time : N.A Think Time : N.A Minimum Instruction Time : 0**

**Correct Marks : 5 Wrong Marks : 1**

**Question Key Details :**

Key	Value
Comprehension	Compl

Read the passage and answer the following questions:-

"In 2010, the National Legal Services Authority of India (NALSA) adopted the National Legal Service Authority (Free and Competent Legal Services) Regulations in exercise of its power under Section 29 of Legal Service Authorities Act, 1987. The regulations are applicable to Legal Service Committees of the Supreme Court, High Courts, the States, districts and taluks. The legal service institution is vested with authority to invite applications from legal practitioners with requisite experience to indicate the type of cases they are entrusted with."

Panel of legal aid lawyers is reconstituted

1. every year
2. every three years
3. every 5 years
4. every 2 years

**Options :**

485584135505. 1  
485584135506. 2  
485584135507. 3  
485584135508. 4

**Question Number : 292 Question Id : 48558433877 Question Type : MCQ Option Shuffling : No Is Question Mandatory : No Calculator : None Response Time : N.A Think Time : N.A Minimum Instruction Time : 0**

**Correct Marks : 5 Wrong Marks : 1**

**Question Key Details :**

Key	Value
Comprehension	Compl

ಈ ಗದ್ಯಭಾಗವನ್ನು ಓದಿ ಮತ್ತು ಕೆಳಗಿನ ಪ್ರಶ್ನೆಗಳಿಗೆ ಉತ್ತರಿಸಿ:-

"2010ರಲ್ಲಿ, ಭಾರತದ ರಾಷ್ಟ್ರೀಯ ಕಾನೂನು ಸೇವೆಗಳ ಪ್ರಾಧಿಕಾರ (NALSA)ವು ತನ್ನ ಅಧಿಕಾರವನ್ನು ಬಳಸಲು ಕಾನೂನು ಸೇವೆಗಳ ಪ್ರಾಧಿಕಾರ ಕಾಯ್ದೆ, 1987ರ ವಿಭಾಗ 20ರ ಅಡಿಯಲ್ಲಿ, ರಾಷ್ಟ್ರೀಯ ಕಾನೂನು ಸೇವೆಗಳ ಪ್ರಾಧಿಕಾರ (ಉಚಿತ ಮತ್ತು ಸಕ್ಷಮ ಕಾನೂನು ಸೇವೆಗಳು) ನಿಯಮಗಳನ್ನು ಅಳವಡಿಸಿಕೊಂಡಿತು. ಈ ನಿಬಂಧನೆಗಳು ಸುಪ್ರೀಂ ಕೋರ್ಟ್, ಹೈಕೋರ್ಟ್, ಸರ್ಕಾರಗಳು, ಜಿಲ್ಲೆಗಳು ಮತ್ತು ತಾಲೂಕುಗಳಿಗೆ ಅನ್ವಯವಾಗುತ್ತವೆ. ಕಾನೂನು ಸೇವಾ ಸಂಸ್ಥೆಗಳು ಅಗತ್ಯ ಅನುಭವವನ್ನು ಹೊಂದಿರುವ ಕಾನೂನು ವೃತ್ತಿಪರರಿಂದ ಅರ್ಜಿಗಳನ್ನು ಆಹ್ವಾನಿಸಲು ಮತ್ತು ಅವರಿಗೆ ವಹಿಸಿದ ಪ್ರಕರಣಗಳ ಬಗ್ಗೆಯನ್ನು ಸೂಚಿಸಲು ಅಧಿಕಾರವನ್ನು ಹೊಂದಿರುತ್ತವೆ."

ಕಾನೂನು ನೆರವು ವಕೀಲರ ಪ್ಯಾನೆಲ್ ಅನ್ನು ಮರು ಸಂಘಟಿಸುವ ಆವರ್ತನ:

1. ಪ್ರತಿ ವರ್ಷ
2. ಪ್ರತಿ ಮೂರು ವರ್ಷಗಳ
3. ಪ್ರತಿ 5 ವರ್ಷಗಳು
4. ಪ್ರತಿ 2 ವರ್ಷಗಳು

**Options :**

485584135505. 1  
 485584135506. 2  
 485584135507. 3  
 485584135508. 4

**Question Number : 293 Question Id : 48558433878 Question Type : MCQ Option Shuffling : No Is Question Mandatory : No Calculator : None Response Time : N.A Think Time : N.A Minimum Instruction Time : 0**

**Correct Marks : 5 Wrong Marks : 1**

**Question Key Details :**

Key	Value
Comprehension	Compl

Read the passage and answer the following questions:-

"In 2010, the National Legal Services Authority of India (NALSA) adopted the National Legal Service Authority (Free and Competent Legal Services) Regulations in exercise of its power under Section 29 of Legal Service Authorities Act, 1987. The regulations are applicable to Legal Service Committees of the Supreme Court, High Courts, the States, districts and taluks. The legal service institution is vested with authority to invite applications from legal practitioners with requisite experience to indicate the type of cases they are entrusted with."

For legal aid, services of senior lawyers can be availed only in

1. Murder cases
2. where there is threat to life and liberty of the applicant
3. financial matter
4. court martial

**Options :**

485584135509. 1
485584135510. 2
485584135511. 3
485584135512. 4

**Question Number : 293 Question Id : 48558433878 Question Type : MCQ Option Shuffling : No Is Question Mandatory : No Calculator : None Response Time : N.A Think Time : N.A Minimum Instruction Time : 0**

**Correct Marks : 5 Wrong Marks : 1**

**Question Key Details :**

Key	Value
Comprehension	Compl

ಈ ಗದ್ಯಭಾಗವನ್ನು ಓದಿ ಮತ್ತು ಕೆಳಗಿನ ಪ್ರಶ್ನೆಗಳಿಗೆ ಉತ್ತರಿಸಿ:-

"2010ರಲ್ಲಿ, ಭಾರತದ ರಾಷ್ಟ್ರೀಯ ಕಾನೂನು ಸೇವೆಗಳ ಪ್ರಾಧಿಕಾರ (NALSA)ವು ತನ್ನ ಅಧಿಕಾರವನ್ನು ಬಳಸಲು ಕಾನೂನು ಸೇವೆಗಳ ಪ್ರಾಧಿಕಾರ ಕಾಯ್ದೆ, 1987ರ ವಿಭಾಗ 20ರ ಅಡಿಯಲ್ಲಿ, ರಾಷ್ಟ್ರೀಯ ಕಾನೂನು ಸೇವೆಗಳ ಪ್ರಾಧಿಕಾರ (ಉಚಿತ ಮತ್ತು ಸಕ್ಷಮ ಕಾನೂನು ಸೇವೆಗಳು) ನಿಯಮಗಳನ್ನು ಅಳವಡಿಸಿಕೊಂಡಿತು. ಈ ನಿಬಂಧನೆಗಳು ಸುಪ್ರೀಂ ಕೋರ್ಟ್, ಹೈಕೋರ್ಟ್, ಸರ್ಕಾರಗಳು, ಜಿಲ್ಲೆಗಳು ಮತ್ತು ತಾಲೂಕುಗಳಿಗೆ ಅನ್ವಯವಾಗುತ್ತವೆ. ಕಾನೂನು ಸೇವಾ ಸಂಸ್ಥೆಗಳು ಅಗತ್ಯ ಅನುಭವವನ್ನು ಹೊಂದಿರುವ ಕಾನೂನು ವೃತ್ತಿಪರರಿಂದ ಅರ್ಜಿಗಳನ್ನು ಆಹ್ವಾನಿಸಲು ಮತ್ತು ಅವರಿಗೆ ವಹಿಸಿದ ಪ್ರಕರಣಗಳ ಬಗ್ಗೆಯನ್ನು ಸೂಚಿಸಲು ಅಧಿಕಾರವನ್ನು ಹೊಂದಿರುತ್ತವೆ."

ಕಾನೂನು ನೆರವಿಗೆ, ಈ ಸಂದರ್ಭಗಳಲ್ಲಿ ಮಾತ್ರ ಹಿರಿಯ ವಕೀಲರ ಸೇವೆಯನ್ನು ಪಡೆಯಬಹುದು:

1. ಹತ್ತೆ ಪ್ರಕರಣಗಳು
2. ಅರ್ಜಿದಾರನ ಜೀವ ಮತ್ತು ಸ್ವಾತಂತ್ರ್ಯಕ್ಕೆ ಬೆದರಿಕೆಯಿದ್ದಾಗ
3. ಹಣಕಾಸು ವಿಚಾರಗಳು
4. ಕೋರ್ಟ್ ಮಾರ್ಷಲ್

**Options :**

485584135509. 1
485584135510. 2
485584135511. 3
485584135512. 4

**Question Number : 294 Question Id : 48558433879 Question Type : MCQ Option Shuffling : No Is Question Mandatory : No Calculator : None Response Time : N.A Think Time : N.A Minimum Instruction Time : 0**

**Correct Marks : 5 Wrong Marks : 1**

**Question Key Details :**

Key	Value
Comprehension	Compl

Read the passage and answer the following questions:-

"In 2010, the National Legal Services Authority of India (NALSA) adopted the National Legal Service Authority (Free and Competent Legal Services) Regulations in exercise of its power under Section 29 of Legal Service Authorities Act, 1987. The regulations are applicable to Legal Service Committees of the Supreme Court, High Courts, the States, districts and taluks. The legal service institution is vested with authority to invite applications from legal practitioners with requisite experience to indicate the type of cases they are entrusted with."

Panel lawyers are paid fee in accordance with

1. State regulations
2. BCI norms
3. Central government scale
4. UGC norms

**Options :**

485584135513. 1  
485584135514. 2  
485584135515. 3  
485584135516. 4

**Question Number : 294 Question Id : 48558433879 Question Type : MCQ Option Shuffling : No Is Question Mandatory : No Calculator : None Response Time : N.A Think Time : N.A Minimum Instruction Time : 0**

**Correct Marks : 5 Wrong Marks : 1**

**Question Key Details :**

Key	Value
Comprehension	Compl

ಈ ಗದ್ಯಭಾಗವನ್ನು ಓದಿ ಮತ್ತು ಕೆಳಗಿನ ಪ್ರಶ್ನೆಗಳಿಗೆ ಉತ್ತರಿಸಿ:-

"2010ರಲ್ಲಿ, ಭಾರತದ ರಾಷ್ಟ್ರೀಯ ಕಾನೂನು ಸೇವೆಗಳ ಪ್ರಾಧಿಕಾರ (NALSA)ವು ತನ್ನ ಅಧಿಕಾರವನ್ನು ಬಳಸಲು ಕಾನೂನು ಸೇವೆಗಳ ಪ್ರಾಧಿಕಾರ ಕಾಯ್ದೆ, 1987ರ ವಿಭಾಗ 20ರ ಅಡಿಯಲ್ಲಿ, ರಾಷ್ಟ್ರೀಯ ಕಾನೂನು ಸೇವೆಗಳ ಪ್ರಾಧಿಕಾರ (ಉಚಿತ ಮತ್ತು ಸಕ್ಷಮ ಕಾನೂನು ಸೇವೆಗಳು) ನಿಯಮಗಳನ್ನು ಅಳವಡಿಸಿಕೊಂಡಿತು. ಈ ನಿಬಂಧನೆಗಳು ಸುಪ್ರೀಂ ಕೋರ್ಟ್, ಹೈಕೋರ್ಟ್, ಸರ್ಕಾರಗಳು, ಜಿಲ್ಲೆಗಳು ಮತ್ತು ತಾಲೂಕುಗಳಿಗೆ ಅನ್ವಯವಾಗುತ್ತವೆ. ಕಾನೂನು ಸೇವಾ ಸಂಸ್ಥೆಗಳು ಅಗತ್ಯ ಅನುಭವವನ್ನು ಹೊಂದಿರುವ ಕಾನೂನು ವೃತ್ತಿಪರರಿಂದ ಅರ್ಜಿಗಳನ್ನು ಆಹ್ವಾನಿಸಲು ಮತ್ತು ಅವರಿಗೆ ವಹಿಸಿದ ಪ್ರಕರಣಗಳ ಬಗ್ಗೆಯನ್ನು ಸೂಚಿಸಲು ಅಧಿಕಾರವನ್ನು ಹೊಂದಿರುತ್ತವೆ."

ಪ್ಯಾನೆಲ್ ವಕೀಲರಿಗೆ ಶುಲ್ಕಗಳನ್ನು ಈ ಪ್ರಕಾರ ನೀಡಲಾಗುತ್ತದೆ:

1. ರಾಜ್ಯದ ನಿಯಮಗಳು
2. BCI ಸಂಪ್ರದಾಯಗಳು
3. ಕೇಂದ್ರ ಸರ್ಕಾರದ ವೇತನಶ್ರೇಣಿ
4. UGC ಸಂಪ್ರದಾಯಗಳು

**Options :**

485584135513. 1  
485584135514. 2  
485584135515. 3  
485584135516. 4

**Question Number : 295 Question Id : 48558433880 Question Type : MCQ Option Shuffling : No Is Question Mandatory : No Calculator : None Response Time : N.A Think Time : N.A Minimum Instruction Time : 0**

**Correct Marks : 5 Wrong Marks : 1**

**Question Key Details :**

Key	Value
Comprehension	Compl

Read the passage and answer the following questions:-

"In 2010, the National Legal Services Authority of India (NALSA) adopted the National Legal Service Authority (Free and Competent Legal Services) Regulations in exercise of its power under Section 29 of Legal Service Authorities Act, 1987. The regulations are applicable to Legal Service Committees of the Supreme Court, High Courts, the States, districts and taluks. The legal service institution is vested with authority to invite applications from legal practitioners with requisite experience to indicate the type of cases they are entrusted with."

Pre-litigation legal services include:

1. Legal education
2. Arbitration
3. Out of court settlement
4. appearance before judge

**Options :**

485584135517. 1  
485584135518. 2  
485584135519. 3  
485584135520. 4

**Question Number : 295 Question Id : 48558433880 Question Type : MCQ Option Shuffling : No Is Question Mandatory : No Calculator : None Response Time : N.A Think Time : N.A Minimum Instruction Time : 0**

**Correct Marks : 5 Wrong Marks : 1**

**Question Key Details :**

Key	Value
Comprehension	Comp1

ಈ ಗದ್ಯಭಾಗವನ್ನು ಓದಿ ಮತ್ತು ಕೆಳಗಿನ ಪ್ರಶ್ನೆಗಳಿಗೆ ಉತ್ತರಿಸಿ:-

"2010ರಲ್ಲಿ, ಭಾರತದ ರಾಷ್ಟ್ರೀಯ ಕಾನೂನು ಸೇವೆಗಳ ಪ್ರಾಧಿಕಾರ (NALSA)ವು ತನ್ನ ಅಧಿಕಾರವನ್ನು ಬಳಸಲು ಕಾನೂನು ಸೇವೆಗಳ ಪ್ರಾಧಿಕಾರ ಕಾಯ್ದೆ, 1987ರ ವಿಭಾಗ 20ರ ಅಡಿಯಲ್ಲಿ, ರಾಷ್ಟ್ರೀಯ ಕಾನೂನು ಸೇವೆಗಳ ಪ್ರಾಧಿಕಾರ (ಉಚಿತ ಮತ್ತು ಸಕ್ಷಮ ಕಾನೂನು ಸೇವೆಗಳು) ನಿಯಮಗಳನ್ನು ಅಳವಡಿಸಿಕೊಂಡಿತು. ಈ ನಿಬಂಧನೆಗಳು ಸುಪ್ರೀಂ ಕೋರ್ಟ್, ಹೈಕೋರ್ಟ್, ಸರ್ಕಾರಗಳು, ಜಿಲ್ಲೆಗಳು ಮತ್ತು ತಾಲೂಕುಗಳಿಗೆ ಅನ್ವಯವಾಗುತ್ತವೆ. ಕಾನೂನು ಸೇವಾ ಸಂಸ್ಥೆಗಳು ಅಗತ್ಯ ಅನುಭವವನ್ನು ಹೊಂದಿರುವ ಕಾನೂನು ವೃತ್ತಿಪರರಿಂದ ಅರ್ಜಿಗಳನ್ನು ಆಹ್ವಾನಿಸಲು ಮತ್ತು ಅವರಿಗೆ ವಹಿಸಿದ ಪ್ರಕರಣಗಳ ಬಗ್ಗೆಯನ್ನು ಸೂಚಿಸಲು ಅಧಿಕಾರವನ್ನು ಹೊಂದಿರುತ್ತವೆ."

ಲಿಟಿಗೇಷನ್-ಪೂರ್ವದ ಕಾನೂನು ಸೇವೆಗಳು ಇದನ್ನು ಒಳಗೊಳ್ಳುತ್ತವೆ:

1. ಕಾನೂನು ಶಿಕ್ಷಣ
2. ಮಧ್ಯಸ್ಥಿಕೆ
3. ನ್ಯಾಯಾಲಯದ ಹೊರಗೆ ಇತ್ಯರ್ಥ
4. ನ್ಯಾಯಾಧೀಶರ ಮುಂದೆ ಹಾಜರಾಗುವುದು

**Options :**

485584135517. 1  
485584135518. 2  
485584135519. 3  
485584135520. 4

**Sub-Section Number :**

3

**Sub-Section Id :**

4855842433

**Question Shuffling Allowed :**

No

**Is Section Default? :**

null

**Question Number : 296 Question Id : 48558433881 Question Type : MCQ Option Shuffling : No Is Question Mandatory : No Calculator : None Response Time : N.A Think Time : N.A Minimum Instruction Time : 0**

**Correct Marks : 5 Wrong Marks : 1**

**Question Key Details :**

Key	Value
Comprehension	Comp2



The quasi-judicial bodies typically are public administrative agencies under the realm of the executive branch and are largely bestowed with authority similar to courts. These bodies have the power to resolve disputes and also impose punishments. Examples of quasi-judicial institutions include, national and state human rights commissions, consumer redressal forums and commissions, income tax tribunals, and so on. Some of these bodies relating specifically to human rights institutions that include, the National Human Rights Commission, National Commission for Minorities, National Commission for Women, National Commission for Scheduled Castes and the National Commission for Scheduled Tribes. These commissions are independent or autonomous and transparent bodies that are created under specific legislations to promote and protect human rights; for example, the National and State Human Rights Commissions are governed by the Protection of Human Rights Act, 1993. National commissions have jurisdiction over the entire nation and the parallel state commission take matters of human rights violations from the respective states.

The functioning of Quasi judicial bodies is similar to

1. Parliament
2. Judges
3. Magistrate
4. Courts

**Options :**

- 485584135521. 1
- 485584135522. 2
- 485584135523. 3
- 485584135524. 4

**Question Number : 296 Question Id : 48558433881 Question Type : MCQ Option Shuffling : No Is Question Mandatory : No Calculator : None Response Time : N.A Think Time : N.A Minimum Instruction Time : 0**

**Correct Marks : 5 Wrong Marks : 1**

**Question Key Details :**

Key	Value
Comprehension	Comp2

ಅರೆ (ಖಾಸಿ) -ನ್ಯಾಯಾಂಗ ಸಂಸ್ಥೆಗಳು ಕಾರ್ಯನಿರ್ವಹಣೆ ಪೀಠದ ವ್ಯಾಪ್ತಿಯಲ್ಲಿರುವ ಸಾರ್ವಜನಿಕ ಆಡಳಿತ ಸಂಸ್ಥೆಗಳಾಗಿದ್ದು, ಅವು ಬಹುತೇಕ ನ್ಯಾಯಾಲಯಗಳಿಗೆ ಸಮಾನವಾದ ಅಧಿಕಾರವನ್ನು ಪಡೆದಿರುತ್ತವೆ. ಈ ಸಂಸ್ಥೆಗಳು ವಿವಾದಗಳನ್ನು ಪರಿಹರಿಸಲು ಹಾಗೆಯೇ ಶಿಕ್ಷೆಗಳನ್ನು ವಿಧಿಸಲು ಅಧಿಕಾರ ಹೊಂದಿರುತ್ತವೆ. ಅರೆ-ನ್ಯಾಯಾಂಗ ಸಂಸ್ಥೆಗಳ ಕೆಲವು ಉದಾಹರಣೆಗಳಲ್ಲಿ ರಾಷ್ಟ್ರೀಯ ಮತ್ತು ರಾಜ್ಯ ಮಾನವ ಹಕ್ಕುಗಳ ಆಯೋಗಗಳು, ಗ್ರಾಹಕರ ವ್ಯಾಜ್ಯ ಪರಿಹಾರ ವೇದಿಕೆಗಳು ಮತ್ತು ಆಯೋಗಗಳು, ಆದಾಯ ತೆರಿಗೆ ನ್ಯಾಯಮಂಡಳಿಗಳು ಇನ್ನೂ ಮುಂತಾದವು ಸೇರಿವೆ. ಈ ಸಂಸ್ಥೆಗಳಲ್ಲಿ ಕೆಲವು ನಿರ್ದಿಷ್ಟವಾಗಿ ಮಾನವ ಹಕ್ಕುಗಳ ಸಂಸ್ಥೆಗಳಿಗೆ ಸಂಬಂಧಿಸಿದ್ದು, ಅವುಗಳಲ್ಲಿ ರಾಷ್ಟ್ರೀಯ ಮಾನವ ಹಕ್ಕುಗಳ ಆಯೋಗ, ರಾಷ್ಟ್ರೀಯ ಅಲ್ಪಸಂಖ್ಯಾತರ ಆಯೋಗ, ರಾಷ್ಟ್ರೀಯ ಮಹಿಳಾ ಆಯೋಗ, ರಾಷ್ಟ್ರೀಯ ಪರಿಶಿಷ್ಟ ಜಾತಿಗಳ ಆಯೋಗ ಮತ್ತು ರಾಷ್ಟ್ರೀಯ ಪರಿಶಿಷ್ಟ ಪಂಗಡಗಳ ಆಯೋಗವನ್ನು ಒಳಗೊಂಡಿವೆ. ಈ ಆಯೋಗಗಳು ಸ್ವತಂತ್ರವಾಗಿವೆ ಅಥವಾ ಸ್ವಾಯತ್ತವಾಗಿವೆ ಮತ್ತು ಪಾರದರ್ಶಕ ಸಂಸ್ಥೆಗಳಾಗಿವೆ. ಅವುಗಳನ್ನು ಮಾನವ ಹಕ್ಕುಗಳನ್ನು ಪ್ರಚಾರಪಡಿಸಲು ಮತ್ತು ಸಂರಕ್ಷಿಸಲು ನಿರ್ದಿಷ್ಟ ಶಾಸನಗಳ ಅಡಿಯಲ್ಲಿ ರಚಿಸಲಾಗಿದೆ; ಉದಾಹರಣೆಗೆ, ರಾಷ್ಟ್ರೀಯ ಮತ್ತು ರಾಜ್ಯ ಮಾನವ ಹಕ್ಕುಗಳ ಆಯೋಗಗಳು ಮಾನವ ಹಕ್ಕುಗಳ ಸಂರಕ್ಷಣೆ ಕಾಯ್ದೆ, 1993ರ ಅಡಿಯಲ್ಲಿ ನಿಯಂತ್ರಿಸಲ್ಪಟ್ಟಿವೆ. ರಾಷ್ಟ್ರೀಯ ಆಯೋಗಗಳು ದೇಶದೆಲ್ಲೆಡೆ ನ್ಯಾಯವ್ಯಾಪ್ತಿಯನ್ನು ಹೊಂದಿವೆ ಹಾಗೂ ಇದಕ್ಕೆ ಸಮಾನಾಂತರವಾಗಿರುವ ರಾಜ್ಯ ಆಯೋಗಗಳು ಆಯಾ ರಾಜ್ಯಗಳಲ್ಲಿ ಮಾನವ ಹಕ್ಕುಗಳ ಉಲ್ಲಂಘನೆಯ ವಿಷಯಗಳನ್ನು ಕೈಗೆತ್ತಿಕೊಳ್ಳುತ್ತವೆ.

ಅರೆ-ನ್ಯಾಯಾಂಗ ಸಂಸ್ಥೆಗಳ ಕಾರ್ಯನಿರ್ವಹಣೆಯು ಇವರ ರೀತಿಯಲ್ಲಿರುತ್ತದೆ:

1. ಸಂಸತ್ತು
2. ನ್ಯಾಯಾಧೀಶರು
3. ದಂಡಾಧಿಕಾರಿಗಳು
4. ನ್ಯಾಯಾಲಯಗಳು

**Options :**

485584135521. 1  
 485584135522. 2  
 485584135523. 3  
 485584135524. 4

**Question Number : 297 Question Id : 48558433882 Question Type : MCQ Option Shuffling : No Is Question Mandatory : No Calculator : None Response Time : N.A Think Time : N.A Minimum Instruction Time : 0**

**Correct Marks : 5 Wrong Marks : 1**

**Question Key Details :**

Key	Value
Comprehension	Comp2

The quasi-judicial bodies typically are public administrative agencies under the realm of the executive branch and are largely bestowed with authority similar to courts. These bodies have the power to resolve disputes and also impose punishments. Examples of quasi-judicial institutions include, national and state human rights commissions, consumer redressal forums and commissions, income tax tribunals, and so on. Some of these bodies relating specifically to human rights institutions that include, the National Human Rights Commission, National Commission for Minorities, National Commission for Women, National Commission for Scheduled Castes and the National Commission for Scheduled Tribes. These commissions are independent or autonomous and transparent bodies that are created under specific legislations to promote and protect human rights; for example, the National and State Human Rights Commissions are governed by the Protection of Human Rights Act, 1993. National commissions have jurisdiction over the entire nation and the parallel state commission take matters of human rights violations from the respective states.

Which one of the following is not a Quasi judicial body

1. Human Rights Commission
2. Consumer Forums
3. Income Tax Tribunals
4. Parliament

**Options :**

- 485584135525. 1
- 485584135526. 2
- 485584135527. 3
- 485584135528. 4

**Question Number : 297 Question Id : 48558433882 Question Type : MCQ Option Shuffling : No Is Question Mandatory : No Calculator : None Response Time : N.A Think Time : N.A Minimum Instruction Time : 0**

**Correct Marks : 5 Wrong Marks : 1**

**Question Key Details :**

Key	Value
Comprehension	Comp2

ಅರೆ (ಖಾಸಿ) -ನ್ಯಾಯಾಂಗ ಸಂಸ್ಥೆಗಳು ಕಾರ್ಯನಿರ್ವಾಹಕ ಪೀಠದ ವ್ಯಾಪ್ತಿಯಲ್ಲಿರುವ ಸಾರ್ವಜನಿಕ ಆಡಳಿತ ಸಂಸ್ಥೆಗಳಾಗಿದ್ದು, ಅವು ಬಹುತೇಕ ನ್ಯಾಯಾಲಯಗಳಿಗೆ ಸಮಾನವಾದ ಅಧಿಕಾರವನ್ನು ಪಡೆದಿರುತ್ತವೆ. ಈ ಸಂಸ್ಥೆಗಳು ವಿವಾದಗಳನ್ನು ಪರಿಹರಿಸಲು ಹಾಗೆಯೇ ಶಿಕ್ಷೆಗಳನ್ನು ವಿಧಿಸಲು ಅಧಿಕಾರ ಹೊಂದಿರುತ್ತವೆ. ಅರೆ-ನ್ಯಾಯಾಂಗ ಸಂಸ್ಥೆಗಳ ಕೆಲವು ಉದಾಹರಣೆಗಳಲ್ಲಿ ರಾಷ್ಟ್ರೀಯ ಮತ್ತು ರಾಜ್ಯ ಮಾನವ ಹಕ್ಕುಗಳ ಆಯೋಗಗಳು, ಗ್ರಾಹಕರ ವ್ಯಾಜ್ಯ ಪರಿಹಾರ ವೇದಿಕೆಗಳು ಮತ್ತು ಆಯೋಗಗಳು, ಆದಾಯ ತೆರಿಗೆ ನ್ಯಾಯಮಂಡಳಿಗಳು ಇನ್ನೂ ಮುಂತಾದವು ಸೇರಿವೆ. ಈ ಸಂಸ್ಥೆಗಳಲ್ಲಿ ಕೆಲವು ನಿರ್ದಿಷ್ಟವಾಗಿ ಮಾನವ ಹಕ್ಕುಗಳ ಸಂಸ್ಥೆಗಳಿಗೆ ಸಂಬಂಧಿಸಿದ್ದು, ಅವುಗಳಲ್ಲಿ ರಾಷ್ಟ್ರೀಯ ಮಾನವ ಹಕ್ಕುಗಳ ಆಯೋಗ, ರಾಷ್ಟ್ರೀಯ ಅಲ್ಪಸಂಖ್ಯಾತರ ಆಯೋಗ, ರಾಷ್ಟ್ರೀಯ ಮಹಿಳಾ ಆಯೋಗ, ರಾಷ್ಟ್ರೀಯ ಪರಿಶಿಷ್ಟ ಜಾತಿಗಳ ಆಯೋಗ ಮತ್ತು ರಾಷ್ಟ್ರೀಯ ಪರಿಶಿಷ್ಟ ಪಂಗಡಗಳ ಆಯೋಗವನ್ನು ಒಳಗೊಂಡಿವೆ. ಈ ಆಯೋಗಗಳು ಸ್ವತಂತ್ರವಾಗಿವೆ ಅಥವಾ ಸ್ವಾಯತ್ತವಾಗಿವೆ ಮತ್ತು ಪಾರದರ್ಶಕ ಸಂಸ್ಥೆಗಳಾಗಿವೆ. ಅವುಗಳನ್ನು ಮಾನವ ಹಕ್ಕುಗಳನ್ನು ಪ್ರಚಾರಪಡಿಸಲು ಮತ್ತು ಸಂರಕ್ಷಿಸಲು ನಿರ್ದಿಷ್ಟ ಶಾಸನಗಳ ಅಡಿಯಲ್ಲಿ ರಚಿಸಲಾಗಿದೆ; ಉದಾಹರಣೆಗೆ, ರಾಷ್ಟ್ರೀಯ ಮತ್ತು ರಾಜ್ಯ ಮಾನವ ಹಕ್ಕುಗಳ ಆಯೋಗಗಳು ಮಾನವ ಹಕ್ಕುಗಳ ಸಂರಕ್ಷಣೆ ಕಾಯ್ದೆ, 1993ರ ಅಡಿಯಲ್ಲಿ ನಿಯಂತ್ರಿತವಾಗಿವೆ. ರಾಷ್ಟ್ರೀಯ ಆಯೋಗಗಳು ದೇಶದೆಲ್ಲೆಡೆ ನ್ಯಾಯವ್ಯಾಪ್ತಿಯನ್ನು ಹೊಂದಿವೆ ಹಾಗೂ ಇದಕ್ಕೆ ಸಮಾನಾಂತರವಾಗಿರುವ ರಾಜ್ಯ ಆಯೋಗಗಳು ಆಯಾ ರಾಜ್ಯಗಳಲ್ಲಿ ಮಾನವ ಹಕ್ಕುಗಳ ಉಲ್ಲಂಘನೆಯ ವಿಷಯಗಳನ್ನು ಕೈಗೆತ್ತಿಕೊಳ್ಳುತ್ತವೆ.

ಈ ಕೆಳಗಿನವುಗಳಲ್ಲಿ ಯಾವುದು ಅರೆ ನ್ಯಾಯಾಂಗ ಸಂಸ್ಥೆಯಲ್ಲ?

1. ಮಾನವ ಹಕ್ಕುಗಳ ಆಯೋಗ
2. ಗ್ರಾಹಕರ ವೇದಿಕೆಗಳು
3. ಆದಾಯ ತೆರಿಗೆ ನ್ಯಾಯಮಂಡಳಿಗಳು
4. ಸಂಸತ್ತು

**Options :**

485584135525. 1  
 485584135526. 2  
 485584135527. 3  
 485584135528. 4

**Question Number : 298 Question Id : 48558433883 Question Type : MCQ Option Shuffling : No Is Question Mandatory : No Calculator : None Response Time : N.A Think Time : N.A Minimum Instruction Time : 0**

**Correct Marks : 5 Wrong Marks : 1**

**Question Key Details :**

Key	Value
Comprehension	Comp2

The quasi-judicial bodies typically are public administrative agencies under the realm of the executive branch and are largely bestowed with authority similar to courts. These bodies have the power to resolve disputes and also impose punishments. Examples of quasi-judicial institutions include, national and state human rights commissions, consumer redressal forums and commissions, income tax tribunals, and so on. Some of these bodies relating specifically to human rights institutions that include, the National Human Rights Commission, National Commission for Minorities, National Commission for Women, National Commission for Scheduled Castes and the National Commission for Scheduled Tribes. These commissions are independent or autonomous and transparent bodies that are created under specific legislations to promote and protect human rights; for example, the National and State Human Rights Commissions are governed by the Protection of Human Rights Act, 1993. National commissions have jurisdiction over the entire nation and the parallel state commission take matters of human rights violations from the respective states.

The National Human Rights Commission is enacted to protect

1. Geographical Rights
2. Human Rights
3. Patent Rights
4. Copyright Rights

**Options :**

- 485584135529. 1
- 485584135530. 2
- 485584135531. 3
- 485584135532. 4

**Question Number : 298 Question Id : 48558433883 Question Type : MCQ Option Shuffling : No Is Question Mandatory : No Calculator : None Response Time : N.A Think Time : N.A Minimum Instruction Time : 0**

**Correct Marks : 5 Wrong Marks : 1**

**Question Key Details :**

Key	Value
Comprehension	Comp2

ಅರೆ (ಖಾಸಿ) -ನ್ಯಾಯಾಂಗ ಸಂಸ್ಥೆಗಳು ಕಾರ್ಯನಿರ್ವಾಹಕ ಪೀಠದ ವ್ಯಾಪ್ತಿಯಲ್ಲಿರುವ ಸಾರ್ವಜನಿಕ ಆಡಳಿತ ಸಂಸ್ಥೆಗಳಾಗಿದ್ದು, ಅವು ಬಹುತೇಕ ನ್ಯಾಯಾಲಯಗಳಿಗೆ ಸಮಾನವಾದ ಅಧಿಕಾರವನ್ನು ಪಡೆದಿರುತ್ತವೆ. ಈ ಸಂಸ್ಥೆಗಳು ವಿವಾದಗಳನ್ನು ಪರಿಹರಿಸಲು ಹಾಗೆಯೇ ಶಿಕ್ಷೆಗಳನ್ನು ವಿಧಿಸಲು ಅಧಿಕಾರ ಹೊಂದಿರುತ್ತವೆ. ಅರೆ-ನ್ಯಾಯಾಂಗ ಸಂಸ್ಥೆಗಳ ಕೆಲವು ಉದಾಹರಣೆಗಳಲ್ಲಿ ರಾಷ್ಟ್ರೀಯ ಮತ್ತು ರಾಜ್ಯ ಮಾನವ ಹಕ್ಕುಗಳ ಆಯೋಗಗಳು, ಗ್ರಾಹಕರ ವ್ಯಾಜ್ಯ ಪರಿಹಾರ ವೇದಿಕೆಗಳು ಮತ್ತು ಆಯೋಗಗಳು, ಆದಾಯ ತೆರಿಗೆ ನ್ಯಾಯಮಂಡಳಿಗಳು ಇನ್ನೂ ಮುಂತಾದವು ಸೇರಿವೆ. ಈ ಸಂಸ್ಥೆಗಳಲ್ಲಿ ಕೆಲವು ನಿರ್ದಿಷ್ಟವಾಗಿ ಮಾನವ ಹಕ್ಕುಗಳ ಸಂಸ್ಥೆಗಳಿಗೆ ಸಂಬಂಧಿಸಿದ್ದು, ಅವುಗಳಲ್ಲಿ ರಾಷ್ಟ್ರೀಯ ಮಾನವ ಹಕ್ಕುಗಳ ಆಯೋಗ, ರಾಷ್ಟ್ರೀಯ ಅಲ್ಪಸಂಖ್ಯಾತರ ಆಯೋಗ, ರಾಷ್ಟ್ರೀಯ ಮಹಿಳಾ ಆಯೋಗ, ರಾಷ್ಟ್ರೀಯ ಪರಿಶಿಷ್ಟ ಜಾತಿಗಳ ಆಯೋಗ ಮತ್ತು ರಾಷ್ಟ್ರೀಯ ಪರಿಶಿಷ್ಟ ಪಂಗಡಗಳ ಆಯೋಗವನ್ನು ಒಳಗೊಂಡಿವೆ. ಈ ಆಯೋಗಗಳು ಸ್ವತಂತ್ರವಾಗಿವೆ ಅಥವಾ ಸ್ವಾಯತ್ತವಾಗಿವೆ ಮತ್ತು ಪಾರದರ್ಶಕ ಸಂಸ್ಥೆಗಳಾಗಿವೆ. ಅವುಗಳನ್ನು ಮಾನವ ಹಕ್ಕುಗಳನ್ನು ಪ್ರಚಾರಪಡಿಸಲು ಮತ್ತು ಸಂರಕ್ಷಿಸಲು ನಿರ್ದಿಷ್ಟ ಶಾಸನಗಳ ಅಡಿಯಲ್ಲಿ ರಚಿಸಲಾಗಿದೆ; ಉದಾಹರಣೆಗೆ, ರಾಷ್ಟ್ರೀಯ ಮತ್ತು ರಾಜ್ಯ ಮಾನವ ಹಕ್ಕುಗಳ ಆಯೋಗಗಳು ಮಾನವ ಹಕ್ಕುಗಳ ಸಂರಕ್ಷಣೆ ಕಾಯ್ದೆ, 1993ರ ಅಡಿಯಲ್ಲಿ ನಿಯಂತ್ರಿಸಲ್ಪಟ್ಟಿವೆ. ರಾಷ್ಟ್ರೀಯ ಆಯೋಗಗಳು ದೇಶದೆಲ್ಲೆಡೆ ನ್ಯಾಯವ್ಯಾಪ್ತಿಯನ್ನು ಹೊಂದಿವೆ ಹಾಗೂ ಇದಕ್ಕೆ ಸಮಾನಾಂತರವಾಗಿರುವ ರಾಜ್ಯ ಆಯೋಗಗಳು ಆಯಾ ರಾಜ್ಯಗಳಲ್ಲಿ ಮಾನವ ಹಕ್ಕುಗಳ ಉಲ್ಲಂಘನೆಯ ವಿಷಯಗಳನ್ನು ಕೈಗೆತ್ತಿಕೊಳ್ಳುತ್ತವೆ.

ರಾಷ್ಟ್ರೀಯ ಮಾನವ ಹಕ್ಕುಗಳ ಆಯೋಗವು ರಚನೆಯಾಗಿರುವುದು ಇವುಗಳ ರಕ್ಷಣೆಗೆ:

1. ಭೌಗೋಳಿಕ ಹಕ್ಕುಗಳು
2. ಮಾನವ ಹಕ್ಕುಗಳು
3. ಪೇಟೆಂಟ್ ಹಕ್ಕುಗಳು
4. ಕೃತಿಸ್ವಾಮ್ಯ ಹಕ್ಕುಗಳು

**Options :**

485584135529. 1  
 485584135530. 2  
 485584135531. 3  
 485584135532. 4

**Question Number : 299 Question Id : 48558433884 Question Type : MCQ Option Shuffling : No Is Question Mandatory : No Calculator : None Response Time : N.A Think Time : N.A Minimum Instruction Time : 0**

**Correct Marks : 5 Wrong Marks : 1**

**Question Key Details :**

Key	Value
Comprehension	Comp2

The quasi-judicial bodies typically are public administrative agencies under the realm of the executive branch and are largely bestowed with authority similar to courts. These bodies have the power to resolve disputes and also impose punishments. Examples of quasi-judicial institutions include, national and state human rights commissions, consumer redressal forums and commissions, income tax tribunals, and so on. Some of these bodies relating specifically to human rights institutions that include, the National Human Rights Commission, National Commission for Minorities, National Commission for Women, National Commission for Scheduled Castes and the National Commission for Scheduled Tribes. These commissions are independent or autonomous and transparent bodies that are created under specific legislations to promote and protect human rights; for example, the National and State Human Rights Commissions are governed by the Protection of Human Rights Act, 1993. National commissions have jurisdiction over the entire nation and the parallel state commission take matters of human rights violations from the respective states.

The State Human Rights Commission is subordinate to

1. Competition Commission of India
2. Supreme Court of India
3. High Court of the state
4. National Human Rights Commission

**Options :**

- 485584135533. 1
- 485584135534. 2
- 485584135535. 3
- 485584135536. 4

**Question Number : 299 Question Id : 48558433884 Question Type : MCQ Option Shuffling : No Is Question Mandatory : No Calculator : None Response Time : N.A Think Time : N.A Minimum Instruction Time : 0**

**Correct Marks : 5 Wrong Marks : 1**

**Question Key Details :**

Key	Value
Comprehension	Comp2

ಅರೆ (ಖಾಸಿ) -ನ್ಯಾಯಾಂಗ ಸಂಸ್ಥೆಗಳು ಕಾರ್ಯನಿರ್ವಾಹಕ ಪೀಠದ ವ್ಯಾಪ್ತಿಯಲ್ಲಿರುವ ಸಾರ್ವಜನಿಕ ಆಡಳಿತ ಸಂಸ್ಥೆಗಳಾಗಿದ್ದು, ಅವು ಬಹುತೇಕ ನ್ಯಾಯಾಲಯಗಳಿಗೆ ಸಮಾನವಾದ ಅಧಿಕಾರವನ್ನು ಪಡೆದಿರುತ್ತವೆ. ಈ ಸಂಸ್ಥೆಗಳು ವಿವಾದಗಳನ್ನು ಪರಿಹರಿಸಲು ಹಾಗೆಯೇ ಶಿಕ್ಷೆಗಳನ್ನು ವಿಧಿಸಲು ಅಧಿಕಾರ ಹೊಂದಿರುತ್ತವೆ. ಅರೆ-ನ್ಯಾಯಾಂಗ ಸಂಸ್ಥೆಗಳ ಕೆಲವು ಉದಾಹರಣೆಗಳಲ್ಲಿ ರಾಷ್ಟ್ರೀಯ ಮತ್ತು ರಾಜ್ಯ ಮಾನವ ಹಕ್ಕುಗಳ ಆಯೋಗಗಳು, ಗ್ರಾಹಕರ ವ್ಯಾಜ್ಯ ಪರಿಹಾರ ವೇದಿಕೆಗಳು ಮತ್ತು ಆಯೋಗಗಳು, ಆದಾಯ ತೆರಿಗೆ ನ್ಯಾಯಮಂಡಳಿಗಳು ಇನ್ನೂ ಮುಂತಾದವು ಸೇರಿವೆ. ಈ ಸಂಸ್ಥೆಗಳಲ್ಲಿ ಕೆಲವು ನಿರ್ದಿಷ್ಟವಾಗಿ ಮಾನವ ಹಕ್ಕುಗಳ ಸಂಸ್ಥೆಗಳಿಗೆ ಸಂಬಂಧಿಸಿದ್ದು, ಅವುಗಳಲ್ಲಿ ರಾಷ್ಟ್ರೀಯ ಮಾನವ ಹಕ್ಕುಗಳ ಆಯೋಗ, ರಾಷ್ಟ್ರೀಯ ಅಲ್ಪಸಂಖ್ಯಾತರ ಆಯೋಗ, ರಾಷ್ಟ್ರೀಯ ಮಹಿಳಾ ಆಯೋಗ, ರಾಷ್ಟ್ರೀಯ ಪರಿಶಿಷ್ಟ ಜಾತಿಗಳ ಆಯೋಗ ಮತ್ತು ರಾಷ್ಟ್ರೀಯ ಪರಿಶಿಷ್ಟ ಪಂಗಡಗಳ ಆಯೋಗವನ್ನು ಒಳಗೊಂಡಿವೆ. ಈ ಆಯೋಗಗಳು ಸ್ವತಂತ್ರವಾಗಿವೆ ಅಥವಾ ಸ್ವಾಯತ್ತವಾಗಿವೆ ಮತ್ತು ಪಾರದರ್ಶಕ ಸಂಸ್ಥೆಗಳಾಗಿವೆ. ಅವುಗಳನ್ನು ಮಾನವ ಹಕ್ಕುಗಳನ್ನು ಪ್ರಚಾರಪಡಿಸಲು ಮತ್ತು ಸಂರಕ್ಷಿಸಲು ನಿರ್ದಿಷ್ಟ ಶಾಸನಗಳ ಅಡಿಯಲ್ಲಿ ರಚಿಸಲಾಗಿದೆ; ಉದಾಹರಣೆಗೆ, ರಾಷ್ಟ್ರೀಯ ಮತ್ತು ರಾಜ್ಯ ಮಾನವ ಹಕ್ಕುಗಳ ಆಯೋಗಗಳು ಮಾನವ ಹಕ್ಕುಗಳ ಸಂರಕ್ಷಣೆ ಕಾಯ್ದೆ, 1993ರ ಅಡಿಯಲ್ಲಿ ನಿಯಂತ್ರಿಸಲ್ಪಟ್ಟಿವೆ. ರಾಷ್ಟ್ರೀಯ ಆಯೋಗಗಳು ದೇಶದೆಲ್ಲೆಡೆ ನ್ಯಾಯವ್ಯಾಪ್ತಿಯನ್ನು ಹೊಂದಿವೆ ಹಾಗೂ ಇದಕ್ಕೆ ಸಮಾನಾಂತರವಾಗಿರುವ ರಾಜ್ಯ ಆಯೋಗಗಳು ಆಯಾ ರಾಜ್ಯಗಳಲ್ಲಿ ಮಾನವ ಹಕ್ಕುಗಳ ಉಲ್ಲಂಘನೆಯ ವಿಷಯಗಳನ್ನು ಕೈಗೆತ್ತಿಕೊಳ್ಳುತ್ತವೆ.

ರಾಜ್ಯ ಮಾನವ ಹಕ್ಕುಗಳ ಆಯೋಗವು ಇದರ ಅಧೀನ ಸಂಸ್ಥೆಯಾಗಿದೆ:

1. ಕಾಂಪಿಟಿಷನ್ ಕಮಿಷನ್ ಆಫ್ ಇಂಡಿಯಾ
2. ಭಾರತದ ಸುಪ್ರೀಂ ಕೋರ್ಟ್
3. ರಾಜ್ಯದ ಹೈಕೋರ್ಟ್
4. ರಾಷ್ಟ್ರೀಯ ಮಾನವ ಹಕ್ಕುಗಳ ಆಯೋಗ

**Options :**

485584135533. 1  
 485584135534. 2  
 485584135535. 3  
 485584135536. 4

**Question Number : 300 Question Id : 48558433885 Question Type : MCQ Option Shuffling : No Is Question Mandatory : No Calculator : None Response Time : N.A Think Time : N.A Minimum Instruction Time : 0**

**Correct Marks : 5 Wrong Marks : 1**

**Question Key Details :**

Key	Value
Comprehension	Comp2



The quasi-judicial bodies typically are public administrative agencies under the realm of the executive branch and are largely bestowed with authority similar to courts. These bodies have the power to resolve disputes and also impose punishments. Examples of quasi-judicial institutions include, national and state human rights commissions, consumer redressal forums and commissions, income tax tribunals, and so on. Some of these bodies relating specifically to human rights institutions that include, the National Human Rights Commission, National Commission for Minorities, National Commission for Women, National Commission for Scheduled Castes and the National Commission for Scheduled Tribes. These commissions are independent or autonomous and transparent bodies that are created under specific legislations to promote and protect human rights; for example, the National and State Human Rights Commissions are governed by the Protection of Human Rights Act, 1993. National commissions have jurisdiction over the entire nation and the parallel state commission take matters of human rights violations from the respective states.

The National and State Human Rights Commission are governed under \_\_\_\_\_.

1. Environment Protection Act, 1986
2. Protection of Human Rights Act, 1993
3. Consumer of Protection Act, 2019
4. Protection of Civil Rights Act, 1955

**Options :**

- 485584135537. 1
- 485584135538. 2
- 485584135539. 3
- 485584135540. 4

**Question Number : 300 Question Id : 48558433885 Question Type : MCQ Option Shuffling : No Is Question Mandatory : No Calculator : None Response Time : N.A Think Time : N.A Minimum Instruction Time : 0**

**Correct Marks : 5 Wrong Marks : 1**

**Question Key Details :**

Key	Value
Comprehension	Comp2

ಅರೆ (ಖಾಸಿ) -ನ್ಯಾಯಾಂಗ ಸಂಸ್ಥೆಗಳು ಕಾರ್ಯನಿರ್ವಾಹಕ ಪೀಠದ ವ್ಯಾಪ್ತಿಯಲ್ಲಿರುವ ಸಾರ್ವಜನಿಕ ಆಡಳಿತ ಸಂಸ್ಥೆಗಳಾಗಿದ್ದು, ಅವು ಬಹುತೇಕ ನ್ಯಾಯಾಲಯಗಳಿಗೆ ಸಮಾನವಾದ ಅಧಿಕಾರವನ್ನು ಪಡೆದಿರುತ್ತವೆ. ಈ ಸಂಸ್ಥೆಗಳು ವಿವಾದಗಳನ್ನು ಪರಿಹರಿಸಲು ಹಾಗೆಯೇ ಶಿಕ್ಷೆಗಳನ್ನು ವಿಧಿಸಲು ಅಧಿಕಾರ ಹೊಂದಿರುತ್ತವೆ. ಅರೆ-ನ್ಯಾಯಾಂಗ ಸಂಸ್ಥೆಗಳ ಕೆಲವು ಉದಾಹರಣೆಗಳಲ್ಲಿ ರಾಷ್ಟ್ರೀಯ ಮತ್ತು ರಾಜ್ಯ ಮಾನವ ಹಕ್ಕುಗಳ ಆಯೋಗಗಳು, ಗ್ರಾಹಕರ ವ್ಯಾಜ್ಯ ಪರಿಹಾರ ವೇದಿಕೆಗಳು ಮತ್ತು ಆಯೋಗಗಳು, ಆದಾಯ ತೆರಿಗೆ ನ್ಯಾಯಮಂಡಳಿಗಳು ಇನ್ನೂ ಮುಂತಾದವು ಸೇರಿವೆ. ಈ ಸಂಸ್ಥೆಗಳಲ್ಲಿ ಕೆಲವು ನಿರ್ದಿಷ್ಟವಾಗಿ ಮಾನವ ಹಕ್ಕುಗಳ ಸಂಸ್ಥೆಗಳಿಗೆ ಸಂಬಂಧಿಸಿದ್ದು, ಅವುಗಳಲ್ಲಿ ರಾಷ್ಟ್ರೀಯ ಮಾನವ ಹಕ್ಕುಗಳ ಆಯೋಗ, ರಾಷ್ಟ್ರೀಯ ಅಲ್ಪಸಂಖ್ಯಾತರ ಆಯೋಗ, ರಾಷ್ಟ್ರೀಯ ಮಹಿಳಾ ಆಯೋಗ, ರಾಷ್ಟ್ರೀಯ ಪರಿಶಿಷ್ಟ ಜಾತಿಗಳ ಆಯೋಗ ಮತ್ತು ರಾಷ್ಟ್ರೀಯ ಪರಿಶಿಷ್ಟ ಪಂಗಡಗಳ ಆಯೋಗವನ್ನು ಒಳಗೊಂಡಿವೆ. ಈ ಆಯೋಗಗಳು ಸ್ವತಂತ್ರವಾಗಿವೆ ಅಥವಾ ಸ್ವಾಯತ್ತವಾಗಿವೆ ಮತ್ತು ಪಾರದರ್ಶಕ ಸಂಸ್ಥೆಗಳಾಗಿವೆ. ಅವುಗಳನ್ನು ಮಾನವ ಹಕ್ಕುಗಳನ್ನು ಪ್ರಚಾರಪಡಿಸಲು ಮತ್ತು ಸಂರಕ್ಷಿಸಲು ನಿರ್ದಿಷ್ಟ ಶಾಸನಗಳ ಅಡಿಯಲ್ಲಿ ರಚಿಸಲಾಗಿದೆ; ಉದಾಹರಣೆಗೆ, ರಾಷ್ಟ್ರೀಯ ಮತ್ತು ರಾಜ್ಯ ಮಾನವ ಹಕ್ಕುಗಳ ಆಯೋಗಗಳು ಮಾನವ ಹಕ್ಕುಗಳ ಸಂರಕ್ಷಣೆ ಕಾಯ್ದೆ, 1993ರ ಅಡಿಯಲ್ಲಿ ನಿಯಂತ್ರಿತವಾಗಿವೆ. ರಾಷ್ಟ್ರೀಯ ಆಯೋಗಗಳು ದೇಶದೆಲ್ಲೆಡೆ ನ್ಯಾಯವ್ಯಾಪ್ತಿಯನ್ನು ಹೊಂದಿವೆ ಹಾಗೂ ಇದಕ್ಕೆ ಸಮಾನಾಂತರವಾಗಿರುವ ರಾಜ್ಯ ಆಯೋಗಗಳು ಆಯಾ ರಾಜ್ಯಗಳಲ್ಲಿ ಮಾನವ ಹಕ್ಕುಗಳ ಉಲ್ಲಂಘನೆಯ ವಿಷಯಗಳನ್ನು ಕೈಗೆತ್ತಿಕೊಳ್ಳುತ್ತವೆ.

ರಾಷ್ಟ್ರೀಯ ಮತ್ತು ರಾಜ್ಯ ಮಾನವ ಹಕ್ಕುಗಳ ಆಯೋಗಗಳು \_\_\_\_\_ ಅಡಿಯಲ್ಲಿ ನಿಯಂತ್ರಿತವಾಗಿವೆ.

1. ಪರಿಸರ ಸಂರಕ್ಷಣೆ ಕಾಯ್ದೆ, 1986
2. ಮಾನವ ಹಕ್ಕುಗಳ ಸಂರಕ್ಷಣೆ ಕಾಯ್ದೆ, 1993
3. ಗ್ರಾಹಕ ರಕ್ಷಣಾ ಕಾಯ್ದೆ, 2019
4. ನಾಗರಿಕ ಹಕ್ಕುಗಳ ಸಂರಕ್ಷಣೆ ಕಾಯ್ದೆ, 1955

**Options :**

- 485584135537. 1
- 485584135538. 2
- 485584135539. 3
- 485584135540. 4

**Performing Arts**

<b>Group Number :</b>	10
<b>Group Id :</b>	485584748
<b>Group Maximum Duration :</b>	45
<b>Group Minimum Duration :</b>	45
<b>Show Attended Group? :</b>	No
<b>Edit Attended Group? :</b>	No
<b>Break time :</b>	0
<b>Group Marks :</b>	200
<b>Is this Group for Examiner? :</b>	No
<b>Examiner permission :</b>	Cant View
<b>Show Progress Bar? :</b>	No

**Compulsory**

**Section Id :** 485584862  
**Section Number :** 1  
**Section type :** Online  
**Mandatory or Optional :** Mandatory  
**Number of Questions :** 20  
**Number of Questions to be attempted :** 20  
**Section Marks :** 100  
**Enable Mark as Answered Mark for Review and Clear Response :** Yes  
**Maximum Instruction Time :** 0  
**Sub-Section Number :** 1  
**Sub-Section Id :** 4855842434  
**Question Shuffling Allowed :** No  
**Is Section Default? :** null

**Question Number : 301 Question Id : 48558433616 Question Type : MCQ Option Shuffling : No Is Question Mandatory : No Calculator : None Response Time : N.A Think Time : N.A Minimum Instruction Time : 0**

**Correct Marks : 5 Wrong Marks : 1**

**Question Key Details :**

Key	Value
Comprehension	Comp1

Read the paragraph and answer the following questions:

Raga has been manifested through Anibaddha and Nibaddha. Anibaddha refers to free extempore development of a raga. In ancient period, it was done under the concept of Alapti. Alapti is of two types - Ragalapti and Rupkalapti. alapti is governed by Svasthana. there are four types of Svasthana known as Prathama, Dvitya, Tritiya and Chaturtha Svasthana. Rupkalapti is done in two steps, that is, Pratigrahanika and Bhanjani. Bhanjani can further be done in two ways which are Sthaya Bhanjani and Rupak Bhanjani.

Anibaddha is :

1. A composition fixed to Tala
2. A free extempore development of a raga
3. A composition set to Teental
4. A development of a raga with Tanas set to Tala

**Options :**

485584134461. 1  
485584134462. 2  
485584134463. 3  
485584134464. 4

**Question Number : 301 Question Id : 48558433616 Question Type : MCQ Option Shuffling : No Is Question Mandatory : No Calculator : None Response Time : N.A Think Time : N.A Minimum Instruction Time : 0**

**Correct Marks : 5 Wrong Marks : 1**

**Question Key Details :**

Key	Value
Comprehension	Comp1

ವಾಕ್ಯಪುಂಜವನ್ನು ಓದಿ ಮತ್ತು ಕೆಳಗಿನ ಪ್ರಶ್ನೆಗಳನ್ನು ಉತ್ತರಿಸಿ:

ರಾಗವನ್ನು ಅನಿಬದ್ಧ ಮತ್ತು ನಿಬದ್ಧದ ಮೂಲಕ ಪ್ರಕಟಿಸಲಾಗಿದೆ. ಅನಿಬದ್ಧವು ಮುಕ್ತ ಪೂರ್ವ ಸಿದ್ಧತೆಯಿಲ್ಲದೆ ಒಂದು ರಾಗದ ಬೆಳವಣಿಗೆಯನ್ನು ಸೂಚಿಸುತ್ತದೆ. ಪ್ರಾಚೀನ ಕಾಲದಲ್ಲಿ ಇದನ್ನು ಅಲಾಪ್ತಿ ಕಲ್ಪನೆ ಅಡಿಯಲ್ಲಿ ಮಾಡುತ್ತಿದ್ದರು. ಅಲಾಪ್ತಿಯಲ್ಲಿ ರಾಗಲಾಪ್ತಿ ಮತ್ತು ರೂಪಲಾಪ್ತಿ ಎಂದು ಎರಡು ವಿಧಗಳು. ಅಲಾಪ್ತಿಯು ಸ್ವಸ್ಥಾನದಿಂದ ನಿಯಂತ್ರಿಸಲ್ಪಡುತ್ತಿತ್ತು. ಸ್ವಸ್ಥಾನದಲ್ಲಿ ಪ್ರಥಮ, ದ್ವಿತೀಯ, ತೃತೀಯ ಮತ್ತು ಚತುರ್ಥ ಸ್ವಸ್ಥಾನಗಳೆಂದು ನಾಲ್ಕು ವಿಧಗಳು. ರೂಪಲಾಪ್ತಿಯು ಎರಡು ಹಂತಗಳಲ್ಲಿ ಮಾಡುತ್ತಿದ್ದರು. ಅದೇನೆಂದರೆ, ಪ್ರತಿಗ್ರಹಣಿಕ ಮತ್ತು ಭಾಂಜನಿ. ಭಾಂಜನಿಯನ್ನು ಮತ್ತೆ ಸ್ವಾಯ ಭಾಂಜನಿ ಮತ್ತು ರೂಪಕ ಭಾಂಜನಿ ಎಂಬ ಎರಡು ರೀತಿಯಿಂದ ಮಾಡುತ್ತಿದ್ದರು.

ಅನಿಬದ್ಧವು

1. ತಾಳಕ್ಕೆ ಜೋಡಿಸಿದ ಒಂದು ಸಂಯೋಜನೆ
2. ಒಂದು ರಾಗದ ಮುಕ್ತ ಪೂರ್ವಸಿದ್ಧತೆಯಿಲ್ಲದ ಬೆಳವಣಿಗೆ
3. ತೀನ್ ತಾಳಿಗೆ ಹೊಂದಿಸಿದ ಒಂದು ಸಂಯೋಜನೆ
4. ತಾಳಕ್ಕೆ ಹೊಂದಿಸಿದ ಒಂದು ರಾಗದ ಬೆಳವಣಿಗೆ

**Options :**

485584134461. 1
485584134462. 2
485584134463. 3
485584134464. 4

**Question Number : 302 Question Id : 48558433617 Question Type : MCQ Option Shuffling : No Is Question Mandatory : No Calculator : None Response Time : N.A Think Time : N.A Minimum Instruction Time : 0**

**Correct Marks : 5 Wrong Marks : 1**

**Question Key Details :**

Key	Value
Comprehension	Comp1

Read the paragraph and answer the following questions:

Raga has been manifested through Anibaddha and Nibaddha. Anibaddha refers to free extempore development of a raga. In ancient period, it was done under the concept of Alapti. Alapti is of two types - Ragalapti and Rupkalapti. alapti is governed by Svasthana. there are four types of Svasthana known as Prathama, Dvitya, Tritiya and Chaturtha Svasthana. Rupkalapti is done in two steps, that is, Pratigrahanika and Bhanjani. Bhanjani can further be done in two ways which are Sthaya Bhanjani and Rupak Bhanjani.

How many varieties of Alapti are there?

1. 2
2. 4
3. 5
4. 7

**Options :**

485584134465. 1  
485584134466. 2  
485584134467. 3  
485584134468. 4

**Question Number : 302 Question Id : 48558433617 Question Type : MCQ Option Shuffling : No Is Question Mandatory : No Calculator : None Response Time : N.A Think Time : N.A Minimum Instruction Time : 0**

**Correct Marks : 5 Wrong Marks : 1**

**Question Key Details :**

Key	Value
Comprehension	Comp1

ವಾಕ್ಯಪುಂಜವನ್ನು ಓದಿ ಮತ್ತು ಕೆಳಗಿನ ಪ್ರಶ್ನೆಗಳನ್ನು ಉತ್ತರಿಸಿ:  
ರಾಗವನ್ನು ಅನಿಬದ್ಧ ಮತ್ತು ನಿಬದ್ಧದ ಮೂಲಕ ಪ್ರಕಟಿಸಲಾಗಿದೆ. ಅನಿಬದ್ಧವು ಮುಕ್ತ ಪೂರ್ವ ಸಿದ್ಧತೆಯಿಲ್ಲ, ಒಂದು ರಾಗದ ಬೆಳವಣಿಗೆಯನ್ನು ಸೂಚಿಸುತ್ತದೆ. ಪ್ರಾಚೀನ ಕಾಲದಲ್ಲಿ ಇದನ್ನು ಅಲಾಪ್ತಿ ಕಲ್ಪನೆ ಅಡಿಯಲ್ಲಿ ಮಾಡುತ್ತಿದ್ದರು. ಅಲಾಪ್ತಿಯಲ್ಲಿ ರಾಗಲಾಪ್ತಿ ಮತ್ತು ರೂಪಲಾಪ್ತಿ ಎಂದು ಎರಡು ವಿಧಗಳು. ಅಲಾಪ್ತಿಯು ಸ್ವಸ್ಥಾನದಿಂದ ನಿಯಂತ್ರಿಸಲ್ಪಡುತ್ತಿತ್ತು. ಸ್ವಸ್ಥಾನದಲ್ಲಿ ಪ್ರಥಮ, ದ್ವಿತೀಯ, ತೃತೀಯ ಮತ್ತು ಚತುರ್ಥ ಸ್ವಸ್ಥಾನಗಳೆಂದು ನಾಲ್ಕು ವಿಧಗಳು. ರೂಪಲಾಪ್ತಿಯು ಎರಡು ಹಂತಗಳಲ್ಲಿ ಮಾಡುತ್ತಿದ್ದರು. ಅದೇನೆಂದರೆ, ಪ್ರತಿಗ್ರಹಣಿಕ ಮತ್ತು ಭಾಂಜನಿ. ಭಾಂಜನಿಯನ್ನು ಮತ್ತೆ ಸ್ವಾಯ ಭಾಂಜನಿ ಮತ್ತು ರೂಪಕ ಭಾಂಜನಿ ಎಂಬ ಎರಡು ರೀತಿಯಿಂದ ಮಾಡುತ್ತಿದ್ದರು.

ಅಲಾಪ್ತಿಯಲ್ಲಿ ಎಷ್ಟು ವಿಧಗಳು?

1. 2
2. 4
3. 5
4. 7

**Options :**

485584134465. 1  
485584134466. 2  
485584134467. 3  
485584134468. 4

**Question Number : 303 Question Id : 48558433618 Question Type : MCQ Option Shuffling : No Is Question Mandatory : No Calculator : None Response Time : N.A Think Time : N.A Minimum Instruction Time : 0**

**Correct Marks : 5 Wrong Marks : 1**

**Question Key Details :**

Key	Value
Comprehension	Comp1

Read the paragraph and answer the following questions:

Raga has been manifested through Anibaddha and Nibaddha. Anibaddha refers to free extempore development of a raga. In ancient period, it was done under the concept of Alapti. Alapti is of two types - Ragalapti and Rupkalapti. alapti is governed by Svasthana. there are four types of Svasthana known as Prathama, Dvitya, Tritiya and Chaturtha Svasthana. Rupkalapti is done in two steps, that is, Pratigrahanika and Bhanjani. Bhanjani can further be done in two ways which are Sthaya Bhanjani and Rupak Bhanjani.

Alapti is governed by :

1. Sthaya
2. Nature of Tala
3. Svasthana
4. Nibaddha

**Options :**

485584134469. 1
485584134470. 2
485584134471. 3
485584134472. 4

**Question Number : 303 Question Id : 48558433618 Question Type : MCQ Option Shuffling : No Is Question Mandatory : No Calculator : None Response Time : N.A Think Time : N.A Minimum Instruction Time : 0**

**Correct Marks : 5 Wrong Marks : 1**

**Question Key Details :**

Key	Value
Comprehension	Compl

ವಾಕ್ಯಪುಂಜವನ್ನು ಓದಿ ಮತ್ತು ಕೆಳಗಿನ ಪ್ರಶ್ನೆಗಳನ್ನು ಉತ್ತರಿಸಿ:

ರಾಗವನ್ನು ಅನಿಬದ್ಧ ಮತ್ತು ನಿಬದ್ಧದ ಮೂಲಕ ಪ್ರಕಟಿಸಲಾಗಿದೆ. ಅನಿಬದ್ಧವು ಮುಕ್ತ ಪೂರ್ವ ಸಿದ್ಧತೆಯಿಲ್ಲ, ಒಂದು ರಾಗದ ಬೆಳವಣಿಗೆಯನ್ನು ಸೂಚಿಸುತ್ತದೆ. ಪ್ರಾಚೀನ ಕಾಲದಲ್ಲಿ ಇದನ್ನು ಅಲಾಪ್ತಿ ಕಲ್ಪನೆ ಅಡಿಯಲ್ಲಿ ಮಾಡುತ್ತಿದ್ದರು. ಅಲಾಪ್ತಿಯಲ್ಲಿ ರಾಗಲಾಪ್ತಿ ಮತ್ತು ರೂಪಲಾಪ್ತಿ ಎಂದು ಎರಡು ವಿಧಗಳು. ಅಲಾಪ್ತಿಯು ಸ್ವಸ್ಥಾನದಿಂದ ನಿಯಂತ್ರಿಸಲ್ಪಡುತ್ತಿತ್ತು. ಸ್ವಸ್ಥಾನದಲ್ಲಿ ಪ್ರಥಮ, ದ್ವಿತೀಯ, ತೃತೀಯ ಮತ್ತು ಚತುರ್ಥ ಸ್ವಸ್ಥಾನಗಳೆಂದು ನಾಲ್ಕು ವಿಧಗಳು. ರೂಪಲಾಪ್ತಿಯು ಎರಡು ಹಂತಗಳಲ್ಲಿ ಮಾಡುತ್ತಿದ್ದರು. ಅದೇನೆಂದರೆ, ಪ್ರತಿಗ್ರಹಣಿಕ ಮತ್ತು ಭಾಂಜನಿ. ಭಾಂಜನಿಯನ್ನು ಮತ್ತೆ ಸ್ವಾಯ ಭಾಂಜನಿ ಮತ್ತು ರೂಪಕ್ ಭಾಂಜನಿ ಎಂಬ ಎರಡು ರೀತಿಯಿಂದ ಮಾಡುತ್ತಿದ್ದರು.

ಅಲಾಪಿಯು ನಿಯಂತ್ರಿಸಲ್ಪಡುವುದು ಇದರಿಂದ:

1. ಸ್ವಾಯ
2. ತಾಳದ ಸ್ವರೂಪ
3. ಸ್ವಸ್ಥಾನ
4. ನಿಬದ್ಧ

**Options :**

485584134469. 1
485584134470. 2
485584134471. 3
485584134472. 4

**Question Number : 304 Question Id : 48558433619 Question Type : MCQ Option Shuffling : No Is Question Mandatory : No Calculator : None Response Time : N.A Think Time : N.A Minimum Instruction Time : 0**

**Correct Marks : 5 Wrong Marks : 1**

**Question Key Details :**

Key	Value
Comprehension	Compl

Read the paragraph and answer the following questions:

Raga has been manifested through Anibaddha and Nibaddha. Anibaddha refers to free extempore development of a raga. In ancient period, it was done under the concept of Alapti. Alapti is of two types - Ragalapti and Rupkalapti. alapti is governed by Svasthana. there are four types of Svasthana known as Prathama, Dvitya, Tritiya and Chaturtha Svasthana. Rupkalapti is done in two steps, that is, Pratigrahanika and Bhanjani. Bhanjani can further be done in two ways which are Sthaya Bhanjani and Rupak Bhanjani.

Pratigrahanika and Bhanjani are the varieties of :

1. Dhatu
2. Gram
3. Prathama
4. Rupkalapti

**Options :**

485584134473. 1  
 485584134474. 2  
 485584134475. 3  
 485584134476. 4

**Question Number : 304 Question Id : 48558433619 Question Type : MCQ Option Shuffling : No Is Question Mandatory : No Calculator : None Response Time : N.A Think Time : N.A Minimum Instruction Time : 0**

**Correct Marks : 5 Wrong Marks : 1**

**Question Key Details :**

Key	Value
Comprehension	Compl

ವಾಕ್ಯಪುಂಜವನ್ನು ಓದಿ ಮತ್ತು ಕೆಲಗಿನ ಪ್ರಶ್ನೆಗಳನ್ನು ಉತ್ತರಿಸಿ:

ರಾಗವನ್ನು ಅನಿಬದ್ಧ ಮತ್ತು ನಿಬದ್ಧದ ಮೂಲಕ ಪ್ರಕಟಿಸಲಾಗಿದೆ. ಅನಿಬದ್ಧವು ಮುಕ್ತ ಪೂರ್ವ ಸಿದ್ಧತೆಯಿಲ್ಲ ಒಂದು ರಾಗದ ಬೆಳವಣಿಗೆಯನ್ನು ಸೂಚಿಸುತ್ತದೆ. ಪ್ರಾಚೀನ ಕಾಲದಲ್ಲಿ ಇದನ್ನು ಅಲಾಪ್ತಿ ಕಲ್ಪನೆ ಅಡಿಯಲ್ಲಿ ಮಾಡುತ್ತಿದ್ದರು. ಅಲಾಪ್ತಿಯಲ್ಲಿ ರಾಗಲಾಪ್ತಿ ಮತ್ತು ರೂಪಲಾಪ್ತಿ ಎಂದು ಎರಡು ವಿಧಗಳು. ಅಲಾಪ್ತಿಯು ಸ್ವಸ್ಥಾನದಿಂದ ನಿಯಂತ್ರಿಸಲ್ಪಡುತ್ತಿತ್ತು. ಸ್ವಸ್ಥಾನದಲ್ಲಿ ಪ್ರಥಮ, ದ್ವಿತೀಯ, ತೃತೀಯ ಮತ್ತು ಚತುರ್ಥ ಸ್ವಸ್ಥಾನಗಳೆಂದು ನಾಲ್ಕು ವಿಧಗಳು. ರೂಪಲಾಪ್ತಿಯು ಎರಡು ಹಂತಗಳಲ್ಲಿ ಮಾಡುತ್ತಿದ್ದರು. ಅದೇನೆಂದರೆ, ಪ್ರತಿಗ್ರಹಣಿಕ ಮತ್ತು ಭಾಂಜನಿ. ಭಾಂಜನಿಯನ್ನು ಮತ್ತೆ ಸ್ಥಾಯ ಭಾಂಜನಿ ಮತ್ತು ರೂಪಕ ಭಾಂಜನಿ ಎಂಬ ಎರಡು ರೀತಿಯಿಂದ ಮಾಡುತ್ತಿದ್ದರು.

ಪ್ರತಿಗ್ರಹಣಿಕ ಮತ್ತು ಭಾಂಜನಿಗಳು ಇದರ ವಿಧಗಳು

1. ಧಾತು
2. ಗ್ರಾಮ್
3. ಪ್ರಥಮ
4. ರೂಪ್ಯಲಾಪಿ

**Options :**

485584134473. 1
485584134474. 2
485584134475. 3
485584134476. 4

**Question Number : 305 Question Id : 48558433620 Question Type : MCQ Option Shuffling : No Is Question Mandatory : No Calculator : None Response Time : N.A Think Time : N.A Minimum Instruction Time : 0**

**Correct Marks : 5 Wrong Marks : 1**

**Question Key Details :**

Key	Value
Comprehension	Comp1

Read the paragraph and answer the following questions:

Raga has been manifested through Anibaddha and Nibaddha. Anibaddha refers to free extempore development of a raga. In ancient period, it was done under the concept of Alapti. Alapti is of two types - Ragalapti and Rupkalapti. alapti is governed by Svasthana. there are four types of Svasthana known as Prathama, Dvitya, Tritiya and Chaturtha Svasthana. Rupkalapti is done in two steps, that is, Pratigrahanika and Bhanjani. Bhanjani can further be done in two ways which are Sthaya Bhanjani and Rupak Bhanjani.

The two types of Bhanjani are:

1. Sthaya and Rupak
2. Rupak and Prathama
3. Tritiya and Sthaya
4. Rupak and Chaturtha

**Options :**

485584134477. 1
485584134478. 2
485584134479. 3
485584134480. 4

**Question Number : 305 Question Id : 48558433620 Question Type : MCQ Option Shuffling : No Is Question Mandatory : No Calculator : None Response Time : N.A Think Time : N.A Minimum Instruction Time : 0**

**Correct Marks : 5 Wrong Marks : 1**

**Question Key Details :**

Key	Value
-----	-------



ವಾಕ್ಯಪುಂಜವನ್ನು ಓದಿ ಮತ್ತು ಕೆಳಗಿನ ಪ್ರಶ್ನೆಗಳನ್ನು ಉತ್ತರಿಸಿ:

ರಾಗವನ್ನು ಅನಿಬದ್ಧ ಮತ್ತು ನಿಬದ್ಧದ ಮೂಲಕ ಪ್ರಕಟಿಸಲಾಗಿದೆ. ಅನಿಬದ್ಧವು ಮುಕ್ತ ಪೂರ್ವ ಸಿದ್ಧತೆಯಿಲ್ಲ. ಒಂದು ರಾಗದ ಬೆಳವಣಿಗೆಯನ್ನು ಸೂಚಿಸುತ್ತದೆ. ಪ್ರಾಚೀನ ಕಾಲದಲ್ಲಿ ಇದನ್ನು ಅಲಾಪ್ತಿ ಕಲ್ಪನೆ ಅಡಿಯಲ್ಲಿ ಮಾಡುತ್ತಿದ್ದರು. ಅಲಾಪ್ತಿಯಲ್ಲಿ ರಾಗಲಾಪ್ತಿ ಮತ್ತು ರೂಪಲಾಪ್ತಿ ಎಂದು ಎರಡು ವಿಧಗಳು. ಅಲಾಪ್ತಿಯು ಸ್ವಸ್ಥಾನದಿಂದ ನಿಯಂತ್ರಿಸಲ್ಪಡುತ್ತಿತ್ತು. ಸ್ವಸ್ಥಾನದಲ್ಲಿ ಪ್ರಥಮ, ದ್ವಿತೀಯ, ತೃತೀಯ ಮತ್ತು ಚತುರ್ಥ ಸ್ವಸ್ಥಾನಗಳೆಂದು ನಾಲ್ಕು ವಿಧಗಳು. ರೂಪಲಾಪ್ತಿಯು ಎರಡು ಹಂತಗಳಲ್ಲಿ ಮಾಡುತ್ತಿದ್ದರು. ಅದೇನೆಂದರೆ, ಪ್ರತಿಗ್ರಹಣಿಕ ಮತ್ತು ಭಾಂಜನಿ. ಭಾಂಜನಿಯನ್ನು ಮತ್ತೆ ಸ್ವಾಯ ಭಾಂಜನಿ ಮತ್ತು ರೂಪಕ್ ಭಾಂಜನಿ ಎಂಬ ಎರಡು ರೀತಿಯಿಂದ ಮಾಡುತ್ತಿದ್ದರು.

ಭಾಂಜನಿಯಲ್ಲಿ ಎರಡು ವಿಧಗಳೆಂದರೆ:

1. ಸ್ವಾಯ ಮತ್ತು ರೂಪಕ್
2. ರೂಪಕ್ ಮತ್ತು ಪ್ರಥಮ
3. ತೃತೀಯ ಮತ್ತು ಸ್ವಾಯ
4. ರೂಪಕ್ ಮತ್ತು ಚತುರ್ಥ

**Options :**

485584134477. 1  
485584134478. 2  
485584134479. 3  
485584134480. 4

**Sub-Section Number :**

2

**Sub-Section Id :**

4855842435

**Question Shuffling Allowed :**

No

**Is Section Default? :**

null

**Question Number : 306 Question Id : 48558433621 Question Type : MCQ Option Shuffling : No Is Question Mandatory : No Calculator : None Response Time : N.A Think Time : N.A Minimum Instruction Time : 0**

**Correct Marks : 5 Wrong Marks : 1**

**Question Key Details :**

Key	Value
Comprehension	Comp2

Read the paragraph and answer the following questions:

The Nobel recipient Rabindranath Tagore had a great place for Manipuri dance in his heart. He was attracted to the Manipuri dance form for its many features. In his poem "Chitrangada", which was later transformed into a dance drama, he takes the story to the land of Manipur. We have seen that Tagore was absorbed in padavali lyrics at a very tender age for the beautiful compositional and the descriptive aspect of the padavali poems. He wrote quite a few poems in Brajbuli like vaishnava lyrics in the pen name Bhanusingha which are a collection under the name of "Bhanusingher Padavali". These lyrics serve as a perfect accompaniment to Manipuri dances and often Bhanusingher Padavalis are performed as a dance drama in Manipuri dance style today.

What was the pen name of the author of 'Bhanusingher Padavali'?

1. Rabindranath Tagore
2. Bhanusingha
3. Chitrangada
4. Vaishnava

**Options :**

485584134481. 1
485584134482. 2
485584134483. 3
485584134484. 4

**Question Number : 306 Question Id : 48558433621 Question Type : MCQ Option Shuffling : No Is Question Mandatory : No Calculator : None Response Time : N.A Think Time : N.A Minimum Instruction Time : 0**

**Correct Marks : 5 Wrong Marks : 1**

**Question Key Details :**

Key	Value
Comprehension	Comp2

ವಾಕ್ಯಪುಂಜವನ್ನು ಓದಿ ಮತ್ತು ಕೆಳಗಿನ ಪ್ರಶ್ನೆಗಳನ್ನು ಉತ್ತರಿಸಿ:

ನೊಬೆಲ್ ಸ್ವೀಕರಿಸಿದ ರವೀಂದ್ರನಾಥ ಟ್ಯಾಗೋರರು ಮಣಿಪುರಿ ನೃತ್ಯಕ್ಕೆ ತಮ್ಮ ಹೃದಯದಲ್ಲಿ ಒಂದು ಉನ್ನತ ಸ್ಥಾನವನ್ನು ನೀಡಿದ್ದರು. ಅವರು ಅದರ ಹಲವು ಗುಣಗಳಿಂದ ಮಣಿಪುರಿ ನೃತ್ಯ ರೂಪಕ್ಕೆ ಆಕರ್ಷಿತರಾಗಿದ್ದರು. ಅವರ ಕವನ 'ಚಿತ್ರಾಂಗದ'ದಲ್ಲಿ ಮಣಿಪುರ ಭೂಮಿಯ ಕಥೆಯನ್ನು ತೆಗೆದುಕೊಂಡಿದ್ದರು. ಅದು ನಂತರ ನೃತ್ಯ ನಾಟಕಕ್ಕೆ ಪರಿವರ್ತಿಸಲಾಯಿತು. ನಾವು ಟ್ಯಾಗೋರರು ಅತಿ ಚಿಕ್ಕ ವಯಸ್ಸಿನಲ್ಲೇ ಪದಾವಳಿ ಕವನಗಳ ಸುಂದರ ಸಂಯೋಜನೆ ಮತ್ತು ವರ್ಣನಾತ್ಮಕ ಅಂಶಗಳಿಂದಾಗಿ ಪದಾವಳಿ ಗೀತೆಯಲ್ಲಿ ಮುಳುಗಿದ್ದರು. ಅವರು ಕೆಲವೊಮ್ಮೆ ಕವನಗಳನ್ನು ಬ್ರಜ್‌ಬುಲಿ ರೀತಿಯ ವೈಷ್ಣವ ಭಾವಗೀತೆಗಳನ್ನು ಕಾವ್ಯನಾಮ 'ಭಾನುಸಿಂಘ್' ಎಂದು ಬರೆದರು. ಅದು 'ಭಾನುಸಿಂಘ್ ಪದಾವಳಿ' ಎಂಬ ಹೆಸರಿನಡಿಯಲ್ಲಿ ಸಂಗ್ರಹವಾಗಿದೆ. ಈ ಭಾವಗೀತೆಗಳು ಮಣಿಪುರಿ ನೃತ್ಯಗಳಿಗೆ ಸರಿಯಾದ ಜೋಡಿಯಾಗಿದೆ ಮತ್ತು ಕೆಲವೊಮ್ಮೆ ಭಾನುಸಿಂಘ್ ಪದಾವಳಿಗಳು ಇಂದಿನ ಮಣಿಪುರಿ ನೃತ್ಯದ ಶೈಲಿಯಲ್ಲಿ ಪ್ರದರ್ಶನಗೊಳ್ಳುತ್ತದೆ.

'ಭಾನುಸಿಂಘ್ ಪದಾವಳಿ' ಲೇಖಕರ ಕಾವ್ಯನಾಮವೇನು?

1. ರವೀಂದ್ರನಾಥ ಟ್ಯಾಗೋರ್
2. ಭಾನುಸಿಂಘ್
3. ಚಿತ್ರಾಂಗದ
4. ವೈಷ್ಣವ

**Options :**

485584134481. 1
485584134482. 2
485584134483. 3
485584134484. 4

Question Number : 307 Question Id : 48558433622 Question Type : MCQ Option Shuffling : No Is Question Mandatory : No Calculator : None Response Time : N.A Think Time : N.A Minimum Instruction Time : 0

Correct Marks : 5 Wrong Marks : 1

Question Key Details :

Key	Value
Comprehension	Comp2

Read the paragraph and answer the following questions:

The Nobel recipient Rabindranath Tagore had a great place for Manipuri dance in his heart. He was attracted to the Manipuri dance form for its many features. In his poem "Chitrangada", which was later transformed into a dance drama, he takes the story to the land of Manipur. We have seen that Tagore was absorbed in padavali lyrics at a very tender age for the beautiful compositional and the descriptive aspect of the padavali poems. He wrote quite a few poems in Brajbuli like vaishnava lyrics in the pen name Bhanusingha which are a collection under the name of "Bhanusingher Padavali". These lyrics serve as a perfect accompaniment to Manipuri dances and often Bhanusingher Padavalis are performed as a dance drama in Manipuri dance style today.

Who got the "Nobel Prize" for his book of poems "Geetanjali"?

1. Rabindranath Tagore
2. Abnindranath Tagore
3. Sachindranath Tagore
4. Brijendranath Tagore

Options :

485584134485. 1  
485584134486. 2  
485584134487. 3  
485584134488. 4

Question Number : 307 Question Id : 48558433622 Question Type : MCQ Option Shuffling : No Is Question Mandatory : No Calculator : None Response Time : N.A Think Time : N.A Minimum Instruction Time : 0

Correct Marks : 5 Wrong Marks : 1

Question Key Details :

Key	Value
Comprehension	Comp2

ವಾಕ್ಯಪುಂಜವನ್ನು ಓದಿ ಮತ್ತು ಕೆಳಗಿನ ಪ್ರಶ್ನೆಗಳನ್ನು ಉತ್ತರಿಸಿ:

ನೊಬೆಲ್ ಸ್ವೀಕರಿಸಿದ ರವೀಂದ್ರನಾಥ ಟ್ಯಾಗೋರರು ಮಣಿಪುರಿ ನೃತ್ಯಕ್ಕೆ ತಮ್ಮ ಹೃದಯದಲ್ಲಿ ಒಂದು ಉನ್ನತ ಸ್ಥಾನವನ್ನು ನೀಡಿದ್ದರು. ಅವರು ಅದರ ಹಲವು ಗುಣಗಳಿಂದ ಮಣಿಪುರಿ ನೃತ್ಯ ರೂಪಕ್ಕೆ ಆಕರ್ಷಿತರಾಗಿದ್ದರು. ಅವರ ಕವನ 'ಚಿತ್ರಾಂಗದ'ದಲ್ಲಿ ಮಣಿಪುರ ಭೂಮಿಯ ಕಥೆಯನ್ನು ತೆಗೆದುಕೊಂಡಿದ್ದರು. ಅದು ನಂತರ ನೃತ್ಯ ನಾಟಕಕ್ಕೆ ಪರಿವರ್ತಿಸಲಾಯಿತು. ನಾವು ಟ್ಯಾಗೋರರು ಅತಿ ಚಿಕ್ಕ ವಯಸ್ಸಿನಲ್ಲೇ ಪದಾವಳಿ ಕವನಗಳ ಸುಂದರ ಸಂಯೋಜನೆ ಮತ್ತು ವರ್ಣನಾತ್ಮಕ ಅಂಶಗಳಿಂದಾಗಿ ಪದಾವಳಿ ಗೀತೆಯಲ್ಲಿ ಮುಳುಗಿದ್ದರು. ಅವರು ಕೆಲವೊಮ್ಮೆ ಕವನಗಳನ್ನು ಬ್ರಜ್‌ಬುಲಿ ರೀತಿಯ ವೈಷ್ಣವ ಭಾವಗೀತೆಗಳನ್ನು ಕಾವ್ಯನಾಮ 'ಭಾನುಸಿಂಘ್' ಎಂದು ಬರೆದರು. ಅದು 'ಭಾನುಸಿಂಘರ್ ಪದಾವಳಿ' ಎಂಬ ಹೆಸರಿನಡಿಯಲ್ಲಿ ಸಂಗ್ರಹವಾಗಿದೆ. ಈ ಭಾವಗೀತೆಗಳು ಮಣಿಪುರಿ ನೃತ್ಯಗಳಿಗೆ ಸರಿಯಾದ ಜೋಡಿಯಾಗಿದೆ ಮತ್ತು ಕೆಲವೊಮ್ಮೆ ಭಾನುಸಿಂಘರ್ ಪದಾವಳಿಗಳು ಇಂದಿನ ಮಣಿಪುರಿ ನೃತ್ಯದ ಶೈಲಿಯಲ್ಲಿ ಪ್ರದರ್ಶನಗೊಳ್ಳುತ್ತದೆ.

ಯಾರು "ಗೀತಾಂಜಲಿ" ಎಂಬ ತಮ್ಮ ಕವನಗಳ ಪುಸ್ತಕಕ್ಕೆ ನೋಬೆಲ್ ಪ್ರಶಸ್ತಿಯನ್ನು ಪಡೆದರು?

1. ರವೀಂದ್ರನಾಥ ಟ್ಯಾಗೋರ್
2. ಅಭೀಂದ್ರನಾಥ ಟ್ಯಾಗೋರ್
3. ಸಚಿಂದ್ರನಾಥ ಟ್ಯಾಗೋರ್
4. ಬ್ರಿಜೇಂದ್ರನಾಥ ಟ್ಯಾಗೋರ್

**Options :**

485584134485. 1  
485584134486. 2  
485584134487. 3  
485584134488. 4

**Question Number : 308 Question Id : 48558433623 Question Type : MCQ Option Shuffling : No Is Question Mandatory : No Calculator : None Response Time : N.A Think Time : N.A Minimum Instruction Time : 0**

**Correct Marks : 5 Wrong Marks : 1**

**Question Key Details :**

Key	Value
Comprehension	Comp2

Read the paragraph and answer the following questions:

The Nobel recipient Rabindranath Tagore had a great place for Manipuri dance in his heart. He was attracted to the Manipuri dance form for its many features. In his poem "Chitrangada", which was later transformed into a dance drama, he takes the story to the land of Manipur. We have seen that Tagore was absorbed in padavali lyrics at a very tender age for the beautiful compositional and the descriptive aspect of the padavali poems. He wrote quite a few poems in Brajbuli like vaishnava lyrics in the pen name Bhanusingha which are a collection under the name of "Bhanusingher Padavali". These lyrics serve as a perfect accompaniment to Manipuri dances and often Bhanusingher Padavali are performed as a dance drama in Manipuri dance style today.

Which poem written by Tagore was later turned into a dance-drama in Manipuri dance?

1. Chandalika
2. Geetanjali
3. Sujata
4. Chitrangada

**Options :**

485584134489. 1  
485584134490. 2  
485584134491. 3  
485584134492. 4

**Question Number : 308 Question Id : 48558433623 Question Type : MCQ Option Shuffling : No Is Question Mandatory : No Calculator : None Response Time : N.A Think Time : N.A Minimum Instruction Time : 0**

**Correct Marks : 5 Wrong Marks : 1**

**Question Key Details :**

Key	Value
Comprehension	Comp2

ವಾಕ್ಯಪುಂಜವನ್ನು ಓದಿ ಮತ್ತು ಕೆಳಗಿನ ಪ್ರಶ್ನೆಗಳನ್ನು ಉತ್ತರಿಸಿ:

ನೊಬೆಲ್ ಸ್ವೀಕರಿಸಿದ ರವೀಂದ್ರನಾಥ ಟ್ಯಾಗೋರರು ಮಣಿಪುರಿ ನೃತ್ಯಕ್ಕೆ ತಮ್ಮ ಹೃದಯದಲ್ಲಿ ಒಂದು ಉನ್ನತ ಸ್ಥಾನವನ್ನು ನೀಡಿದ್ದರು. ಅವರು ಅದರ ಹಲವು ಗುಣಗಳಿಂದ ಮಣಿಪುರಿ ನೃತ್ಯ ರೂಪಕ್ಕೆ ಆಕರ್ಷಿತರಾಗಿದ್ದರು. ಅವರ ಕವನ 'ಚಿತ್ರಾಂಗದ'ದಲ್ಲಿ ಮಣಿಪುರ ಭೂಮಿಯ ಕಥೆಯನ್ನು ತೆಗೆದುಕೊಂಡಿದ್ದರು. ಅದು ನಂತರ ನೃತ್ಯ ನಾಟಕಕ್ಕೆ ಪರಿವರ್ತಿಸಲಾಯಿತು. ನಾವು ಟ್ಯಾಗೋರರು ಅತಿ ಚಿಕ್ಕ ವಯಸ್ಸಿನಲ್ಲೇ ಪದಾವಳಿ ಕವನಗಳ ಸುಂದರ ಸಂಯೋಜನೆ ಮತ್ತು ವರ್ಣನಾತ್ಮಕ ಅಂಶಗಳಿಂದಾಗಿ ಪದಾವಳಿ ಗೀತೆಯಲ್ಲಿ ಮುಳುಗಿದ್ದರು. ಅವರು ಕೆಲವೊಮ್ಮೆ ಕವನಗಳನ್ನು ಬ್ರಜ್‌ಬುಲಿ ರೀತಿಯ ವೈಷ್ಣವ ಭಾವಗೀತೆಗಳನ್ನು ಕಾವ್ಯನಾಮ 'ಭಾನುಸಿಂಘ್' ಎಂದು ಬರೆದರು. ಅದು 'ಭಾನುಸಿಂಘರ್ ಪದಾವಳಿ' ಎಂಬ ಹೆಸರಿನಡಿಯಲ್ಲಿ ಸಂಗ್ರಹವಾಗಿದೆ. ಈ ಭಾವಗೀತೆಗಳು ಮಣಿಪುರಿ ನೃತ್ಯಗಳಿಗೆ ಸರಿಯಾದ ಜೋಡಿಯಾಗಿದೆ ಮತ್ತು ಕೆಲವೊಮ್ಮೆ ಭಾನುಸಿಂಘರ್ ಪದಾವಳಿಗಳು ಇಂದಿನ ಮಣಿಪುರಿ ನೃತ್ಯದ ಶೈಲಿಯಲ್ಲಿ ಪ್ರದರ್ಶನಗೊಳ್ಳುತ್ತದೆ.

ಟ್ಯಾಗೋರರು ಬರೆದ ಕವನ ನಂತರದಲ್ಲಿ ಮಣಿಪುರಿ ನೃತ್ಯದಲ್ಲಿ ನೃತ್ಯ ನಾಟಕವಾಗಿ ತಿರುಗಿದ್ದು ಯಾವುದು?

1. ಚಾಂದಳಿಕ
2. ಗೀತಾಂಜಲಿ
3. ಸುಜಾತ
4. ಚಿತ್ರಾಂಗದ

**Options :**

485584134489. 1  
485584134490. 2  
485584134491. 3  
485584134492. 4

**Question Number : 309 Question Id : 48558433624 Question Type : MCQ Option Shuffling : No Is Question Mandatory : No Calculator : None Response Time : N.A Think Time : N.A Minimum Instruction Time : 0**

**Correct Marks : 5 Wrong Marks : 1**

**Question Key Details :**

Key	Value
Comprehension	Comp2

Read the paragraph and answer the following questions:

The Nobel recipient Rabindranath Tagore had a great place for Manipuri dance in his heart. He was attracted to the Manipuri dance form for its many features. In his poem "Chitrangada", which was later transformed into a dance drama, he takes the story to the land of Manipur. We have seen that Tagore was absorbed in padavali lyrics at a very tender age for the beautiful compositional and the descriptive aspect of the padavali poems. He wrote quite a few poems in Brajbuli like vaishnava lyrics in the pen name Bhanusingha which are a collection under the name of "Bhanusingher Padavali". These lyrics serve as a perfect accompaniment to Manipuri dances and often Bhanusingher Padavalis are performed as a dance drama in Manipuri dance style today.

Which classical dance form had a great place in the heart of Rabindranath Tagore?

1. Mohiniattam
2. Odissi
3. Manipuri
4. Sattriya

**Options :**

485584134493. 1  
485584134494. 2  
485584134495. 3  
485584134496. 4

**Question Number : 309 Question Id : 48558433624 Question Type : MCQ Option Shuffling : No Is Question Mandatory : No Calculator : None Response Time : N.A Think Time : N.A Minimum Instruction Time : 0**

**Correct Marks : 5 Wrong Marks : 1**

**Question Key Details :**

Key	Value
Comprehension	Comp2

ವಾಕ್ಯಪುಂಜವನ್ನು ಓದಿ ಮತ್ತು ಕೆಳಗಿನ ಪ್ರಶ್ನೆಗಳನ್ನು ಉತ್ತರಿಸಿ:

ನೊಬೆಲ್ ಸ್ವೀಕರಿಸಿದ ರವೀಂದ್ರನಾಥ ಟ್ಯಾಗೋರರು ಮಣಿಪುರಿ ನೃತ್ಯಕ್ಕೆ ತಮ್ಮ ಹೃದಯದಲ್ಲಿ ಒಂದು ಉನ್ನತ ಸ್ಥಾನವನ್ನು ನೀಡಿದ್ದರು. ಅವರು ಅದರ ಹಲವು ಗುಣಗಳಿಂದ ಮಣಿಪುರಿ ನೃತ್ಯ ರೂಪಕ್ಕೆ ಆಕರ್ಷಿತರಾಗಿದ್ದರು. ಅವರ ಕವನ 'ಚಿತ್ರಾಂಗದ'ದಲ್ಲಿ ಮಣಿಪುರ ಭೂಮಿಯ ಕಥೆಯನ್ನು ತೆಗೆದುಕೊಂಡಿದ್ದರು. ಅದು ನಂತರ ನೃತ್ಯ ನಾಟಕಕ್ಕೆ ಪರಿವರ್ತಿಸಲಾಯಿತು. ನಾವು ಟ್ಯಾಗೋರರು ಅತಿ ಚಿಕ್ಕ ವಯಸ್ಸಿನಲ್ಲೇ ಪದಾವಳಿ ಕವನಗಳ ಸುಂದರ ಸಂಯೋಜನೆ ಮತ್ತು ವರ್ಣನಾತ್ಮಕ ಅಂಶಗಳಿಂದಾಗಿ ಪದಾವಳಿ ಗೀತೆಯಲ್ಲಿ ಮುಳುಗಿದ್ದರು. ಅವರು ಕೆಲವೊಮ್ಮೆ ಕವನಗಳನ್ನು ಬ್ರಜ್‌ಬುಲಿ ರೀತಿಯ ವೈಷ್ಣವ ಭಾವಗೀತೆಗಳನ್ನು ಕಾವ್ಯನಾಮ 'ಭಾನುಸಿಂಘ್' ಎಂದು ಬರೆದರು. ಅದು 'ಭಾನುಸಿಂಘ್ ಪದಾವಳಿ' ಎಂಬ ಹೆಸರಿನಡಿಯಲ್ಲಿ ಸಂಗ್ರಹವಾಗಿದೆ. ಈ ಭಾವಗೀತೆಗಳು ಮಣಿಪುರಿ ನೃತ್ಯಗಳಿಗೆ ಸರಿಯಾದ ಜೋಡಿಯಾಗಿದೆ ಮತ್ತು ಕೆಲವೊಮ್ಮೆ ಭಾನುಸಿಂಘ್ ಪದಾವಳಿಗಳು ಇಂದಿನ ಮಣಿಪುರಿ ನೃತ್ಯದ ಶೈಲಿಯಲ್ಲಿ ಪ್ರದರ್ಶನಗೊಳ್ಳುತ್ತದೆ.

ಯಾವ ಶಾಸ್ತ್ರೀಯ ನೃತ್ಯವು ರವೀಂದ್ರನಾಥ ಟ್ಯಾಗೋರರ ಹೃದಯದಲ್ಲಿ ಉನ್ನತ ಸ್ಥಾನ ಪಡೆದಿತ್ತು?

1. ಮೋಹಿನಿಯಾಟ್ಟಮ್
2. ಒಡಿಸ್ಸಿ
3. ಮಣಿಪುರಿ
4. ಸತ್ರಿಯಾ

**Options :**

485584134493. 1  
485584134494. 2  
485584134495. 3  
485584134496. 4

Question Number : 310 Question Id : 48558433625 Question Type : MCQ Option Shuffling : No Is Question Mandatory : No Calculator : None Response Time : N.A Think Time : N.A Minimum Instruction Time : 0

Correct Marks : 5 Wrong Marks : 1

Question Key Details :

Key	Value
Comprehension	Comp2

Read the paragraph and answer the following questions:

The Nobel recipient Rabindranath Tagore had a great place for Manipuri dance in his heart. He was attracted to the Manipuri dance form for its many features. In his poem "Chitrangada", which was later transformed into a dance drama, he takes the story to the land of Manipur. We have seen that Tagore was absorbed in padavali lyrics at a very tender age for the beautiful compositional and the descriptive aspect of the padavali poems. He wrote quite a few poems in Brajbuli like vaishnava lyrics in the pen name Bhanusingha which are a collection under the name of "Bhanusingher Padavali". These lyrics serve as a perfect accompaniment to Manipuri dances and often Bhanusingher Padavalis are performed as a dance drama in Manipuri dance style today.

"Bhanusingher Padavali" was written in which language?

1. Brajvalli
2. Bengali
3. Brajbuli
4. Pali

Options :

485584134497. 1  
485584134498. 2  
485584134499. 3  
485584134500. 4

Question Number : 310 Question Id : 48558433625 Question Type : MCQ Option Shuffling : No Is Question Mandatory : No Calculator : None Response Time : N.A Think Time : N.A Minimum Instruction Time : 0

Correct Marks : 5 Wrong Marks : 1

Question Key Details :

Key	Value
Comprehension	Comp2

ವಾಕ್ಯಪುಂಜವನ್ನು ಓದಿ ಮತ್ತು ಕೆಳಗಿನ ಪ್ರಶ್ನೆಗಳನ್ನು ಉತ್ತರಿಸಿ:

ನೊಬೆಲ್ ಸ್ವೀಕರಿಸಿದ ರವೀಂದ್ರನಾಥ ಟ್ಯಾಗೋರರು ಮಣಿಪುರಿ ನೃತ್ಯಕ್ಕೆ ತಮ್ಮ ಹೃದಯದಲ್ಲಿ ಒಂದು ಉನ್ನತ ಸ್ಥಾನವನ್ನು ನೀಡಿದ್ದರು. ಅವರು ಅದರ ಹಲವು ಗುಣಗಳಿಂದ ಮಣಿಪುರಿ ನೃತ್ಯ ರೂಪಕ್ಕೆ ಆಕರ್ಷಿತರಾಗಿದ್ದರು. ಅವರ ಕವನ 'ಚಿತ್ರಾಂಗದ'ದಲ್ಲಿ ಮಣಿಪುರ ಭೂಮಿಯ ಕಥೆಯನ್ನು ತೆಗೆದುಕೊಂಡಿದ್ದರು. ಅದು ನಂತರ ನೃತ್ಯ ನಾಟಕಕ್ಕೆ ಪರಿವರ್ತಿಸಲಾಯಿತು. ನಾವು ಟ್ಯಾಗೋರರು ಅತಿ ಚಿಕ್ಕ ವಯಸ್ಸಿನಲ್ಲೇ ಪದಾವಳಿ ಕವನಗಳ ಸುಂದರ ಸಂಯೋಜನೆ ಮತ್ತು ವರ್ಣನಾತ್ಮಕ ಅಂಶಗಳಿಂದಾಗಿ ಪದಾವಳಿ ಗೀತೆಯಲ್ಲಿ ಮುಳುಗಿದ್ದರು. ಅವರು ಕೆಲವೊಮ್ಮೆ ಕವನಗಳನ್ನು ಬ್ರಜ್‌ಬುಲಿ ರೀತಿಯ ವೈಷ್ಣವ ಭಾವಗೀತೆಗಳನ್ನು ಕಾವ್ಯನಾಮ 'ಭಾನುಸಿಂಘ' ಎಂದು ಬರೆದರು. ಅದು 'ಭಾನುಸಿಂಘರ ಪದಾವಳಿ' ಎಂಬ ಹೆಸರಿನಡಿಯಲ್ಲಿ ಸಂಗ್ರಹವಾಗಿದೆ. ಈ ಭಾವಗೀತೆಗಳು ಮಣಿಪುರಿ ನೃತ್ಯಗಳಿಗೆ ಸರಿಯಾದ ಜೋಡಿಯಾಗಿದೆ ಮತ್ತು ಕೆಲವೊಮ್ಮೆ ಭಾನುಸಿಂಘರ ಪದಾವಳಿಗಳು ಇಂದಿನ ಮಣಿಪುರಿ ನೃತ್ಯದ ಶೈಲಿಯಲ್ಲಿ ಪ್ರದರ್ಶನಗೊಳ್ಳುತ್ತದೆ.

'ಭಾನುಸಿಂಘರ ಪದಾವಲಿ'ಯು ಯಾವ ಭಾಷೆಯಲ್ಲಿ ಬರೆಯಲ್ಪಟ್ಟಿತು?

1. ಬ್ರಜವಲಿ
2. ಬಂಗಾಳಿ
3. ಬ್ರಜ್‌ಬುಲಿ
4. ಪಾಲಿ

**Options :**

485584134497. 1  
485584134498. 2  
485584134499. 3  
485584134500. 4

**Sub-Section Number :**

3

**Sub-Section Id :**

4855842436

**Question Shuffling Allowed :**

No

**Is Section Default? :**

null

**Question Number : 311 Question Id : 48558433626 Question Type : MCQ Option Shuffling : No Is Question Mandatory : No Calculator : None Response Time : N.A Think Time : N.A Minimum Instruction Time : 0**

**Correct Marks : 5 Wrong Marks : 1**

**Question Key Details :**

Key	Value
Comprehension	Comp3

There is a great importance of laya in Indian Talas. Laya has been categorised basically into three types - Vilambit, Madhya and Druta. The rule of application in various forms of laya is called 'Yati'. Yati denotes application of 'gati'. Yati has been classified into five types, Sama, Strotogata, Gopuchha, Mridanga and Pipilika. In sama yati, the same laya is used throughout, that is beginning to end. In strotogata, initially we use slow (vilambit) laya whereas Madhya occurs in the middle and Drut laya comes at the end. When it comes to Gopuchha, exactly inverse order of layas is put to application vis a vis strotogata meaning thereby in the later Druta, Madhya laya and Vilambit laya occurs in the first, middle and last order. In Mridanga, drut laya is used at the outset as well as at the end and Madhya laya is used amidst thereof. In Pipilika, vilambit laya occurs in the beginning, at the end while madhya laya is used in middle order, hence 'Yati' is an important aspect of tala's Das Pranas.

Read the above passage and answer the following questions:

Which is the part of Ten pranas of Talas?

1. Chakradar
2. Uthan
3. Yati
4. Peshkar

**Options :**

485584134501. 1  
485584134502. 2



485584134503. 3

485584134504. 4

**Question Number : 311 Question Id : 48558433626 Question Type : MCQ Option Shuffling : No Is Question Mandatory : No Calculator : None Response Time : N.A Think Time : N.A Minimum Instruction Time : 0**

**Correct Marks : 5 Wrong Marks : 1**

**Question Key Details :**

Key	Value
Comprehension	Comp3

ಕೆಳಗಿನ ವಾಕ್ಯಪುಂಜವನ್ನು ಓದಿ ಮತ್ತು ಕೆಳಗಿನ ಪ್ರಶ್ನೆಗಳನ್ನು ಉತ್ತರಿಸಿ:

ಭಾರತೀಯ ತಾಳಗಳಲ್ಲಿ ಲಯಕ್ಕೆ ಬಹಳ ಮಹತ್ವವಿದೆ. ಮೂಲತಃ ಲಯವನ್ನು ವಿಲಂಬಿತ, ಮಧ್ಯ ಮತ್ತು ಧೃತ ಎಂದು ವಿಧಗಳಾಗಿ ವರ್ಗೀಕರಿಸಲಾಗಿದೆ. ವಿವಿಧ ರೀತಿಯ ಲಯದ ಅನ್ವಯಿಸುವಿಕೆ ನಿಯಮವನ್ನು 'ಯತಿ' ಎಂದು ಕರೆಯುತ್ತಾರೆ. ಯತಿಯು 'ಗತಿ'ಯ ಅನ್ವಯಿಸುವಿಕೆಯನ್ನು ಸೂಚಿಸುತ್ತದೆ. ಯತಿಯನ್ನು ಸಾಮ, ಸ್ತ್ರೋತೋಗತ, ಗೋಪುಚ್ಚ, ಮೃದಂಗ, ಮತ್ತು ಪಿಪಿಲಿಕ ಎಂಬ ಐದು ವಿಧಗಳಾಗಿ ವರ್ಗೀಕರಿಸಲಾಗಿದೆ. ಸಾಮಗತಿಯಲ್ಲಿ ಒಂದೇ ಲಯವನ್ನು ಮೊದಲಿನಿಂದ ಕೊನೆಯವರೆಗೂ ಬಳಸುತ್ತಾರೆ. ಸ್ತ್ರೋತಗತದಲ್ಲಿ ಪ್ರಾರಂಭದಲ್ಲಿ ನಿಧಾನ (ವಿಲಂಬಿತ) ಲಯವನ್ನು ಆದರೆ, ಮಧ್ಯ ಜರುಗುವುದು ಮಧ್ಯದಲ್ಲಿ ಮತ್ತು ಧೃತ ಲಯವು ಕೊನೆಯಲ್ಲಿ ಬರುತ್ತದೆ. ಗೋಪುಚ್ಚಕ್ಕೆ ಬಂದಾಗ, ಸರಿಯಾಗಿ ಲಯದ ವಿಲೋಮ ಕ್ರಮದಲ್ಲಿ ಸ್ತ್ರೋತಗತ ಸಂಬಂಧಿಸಿದಂತೆ ಅನ್ವಯಿಸುತ್ತಾರೆ. ಅರ್ಧವೇನೆಂದರೆ, ಅಂತಿಮ ಧೃತ, ಮಧ್ಯ ಲಯ ಮತ್ತು ವಿಲಂಬಿತ ಲಯವು ಮೊದಲಿಗೆ, ಮಧ್ಯದಲ್ಲಿ ಮತ್ತು ಅಂತಿಮ ಕ್ರಮದಲ್ಲಿ ಜರುಗುವುದು. ಮೃದಂಗದಲ್ಲಿ ಧೃತ ಲಯವನ್ನು ಆರಂಭದಲ್ಲಿ, ಹಾಗೆಯೇ ಕೊನೆಯಲ್ಲಿ ಮತ್ತು ಮಧ್ಯಲಯವನ್ನು ಅವುಗಳ ನಡುವೆ ಬಳಸುತ್ತಾರೆ. ಪಿಪಿಲಿಕಾದಲ್ಲಿ ವಿಲಂಬಿತ ಲಯವು ಆರಂಭದಲ್ಲಿ, ಕೊನೆಯಲ್ಲಿ ಜರುಗುತ್ತದೆ. ಮಧ್ಯಲಯವು ಮಧ್ಯ ಕ್ರಮದಲ್ಲಿ, ಆದ್ದರಿಂದ ಯತಿಯು ತಾಳಗಳ ದಶ ಪ್ರಾಣಗಳ ಮುಖ್ಯ ಅಂಶವಾಗಿದೆ.

ಯಾವುದು ತಾಳಗಳ ಹತ್ತು ಪ್ರಾಣಗಳ ಭಾಗವಾಗಿದೆ?

1. ಚಕ್ರಾಧಾರ
2. ಉತನ್
3. ಯತಿ
4. ಪೇಶ್ವಾರ್

**Options :**

485584134501. 1

485584134502. 2

485584134503. 3

485584134504. 4

**Question Number : 312 Question Id : 48558433627 Question Type : MCQ Option Shuffling : No Is Question Mandatory : No Calculator : None Response Time : N.A Think Time : N.A Minimum Instruction Time : 0**

**Correct Marks : 5 Wrong Marks : 1**

**Question Key Details :**

Key	Value
Comprehension	Comp3

There is a great importance of laya in Indian Talas. Laya has been categorised basically into three types - Vilambit, Madhya and Druta. The rule of application in various forms of laya is called 'Yati'. Yati denotes application of 'gati'. Yati has been classified into five types, Sama, Strotogata, Gopuchha, Mridanga and Pipilika. In sama yati, the same laya is used throughout, that is beginning to end. In strotogata, initially we use slow (vilambit) laya whereas Madhya occurs in the middle and Drut laya comes at the end. When it comes to Gopuchha, exactly inverse order of layas is put to application vis a vis strotogata meaning thereby in the later Druta, Madhya laya and Vilambit laya occurs in the first, middle and last order. In Mridanga, drut laya is used at the outset as well as at the end and Madhya laya is used amidst thereof. In Pipilika, vilambit laya occurs in the beginning, at the end while madhya laya is used in middle order, hence 'Yati' is an important aspect of tala's Das Pranas.

Read the above passage and answer the following questions:

How many types of Yati are there?

1. 3
2. 5
3. 6
4. 8

**Options :**

485584134505. 1  
 485584134506. 2  
 485584134507. 3  
 485584134508. 4

**Question Number : 312 Question Id : 48558433627 Question Type : MCQ Option Shuffling : No Is Question Mandatory : No Calculator : None Response Time : N.A Think Time : N.A Minimum Instruction Time : 0**

**Correct Marks : 5 Wrong Marks : 1**

**Question Key Details :**

Key	Value
Comprehension	Comp3

ಕೆಳಗಿನ ವಾಕ್ಯಪುಂಜವನ್ನು ಓದಿ ಮತ್ತು ಕೆಳಗಿನ ಪ್ರಶ್ನೆಗಳನ್ನು ಉತ್ತರಿಸಿ:

ಭಾರತೀಯ ತಾಳಗಳಲ್ಲಿ ಲಯಕ್ಕೆ ಬಹಳ ಮಹತ್ವವಿದೆ. ಮೂಲತಃ ಲಯವನ್ನು ವಿಲಂಬಿತ, ಮಧ್ಯ ಮತ್ತು ಧೃತ ಎಂದು ವಿಧಗಳಾಗಿ ವರ್ಗೀಕರಿಸಲಾಗಿದೆ. ವಿವಿಧ ರೀತಿಯ ಲಯದ ಅನ್ವಯಿಸುವಿಕೆ ನಿಯಮವನ್ನು 'ಯತಿ' ಎಂದು ಕರೆಯುತ್ತಾರೆ. ಯತಿಯು 'ಗತಿ'ಯ ಅನ್ವಯಿಸುವಿಕೆಯನ್ನು ಸೂಚಿಸುತ್ತದೆ. ಯತಿಯನ್ನು ಸಾಮ, ಸ್ತ್ರೋತೋಗತ, ಗೋಪುಚ್ಚ, ಮೃದಂಗ, ಮತ್ತು ಪಿಪಿಲಿಕ ಎಂಬ ಐದು ವಿಧಗಳಾಗಿ ವರ್ಗೀಕರಿಸಲಾಗಿದೆ. ಸಾಮಗತಿಯಲ್ಲಿ ಒಂದೇ ಲಯವನ್ನು ಮೊದಲಿನಿಂದ ಕೊನೆಯವರೆಗೂ ಬಳಸುತ್ತಾರೆ. ಸ್ತ್ರೋತಗತದಲ್ಲಿ ಪ್ರಾರಂಭದಲ್ಲಿ ನಿಧಾನ (ವಿಲಂಬಿತ) ಲಯವನ್ನು ಆದರೆ, ಮಧ್ಯ ಜರುಗುವುದು ಮಧ್ಯದಲ್ಲಿ ಮತ್ತು ಧೃತ್ ಲಯವು ಕೊನೆಯಲ್ಲಿ ಬರುತ್ತದೆ. ಗೋಪುಚ್ಚಕ್ಕೆ ಬಂದಾಗ, ಸರಿಯಾಗಿ ಲಯದ ವಿಲೋಮ ಕ್ರಮದಲ್ಲಿ ಸ್ತ್ರೋತಗತಗ ಸಂಬಂಧಿಸಿದಂತೆ ಅನ್ವಯಿಸುತ್ತಾರೆ. ಅರ್ಥವೇನೆಂದರೆ, ಅಂತಿಮ ಧೃತ್, ಮಧ್ಯ ಲಯ ಮತ್ತು ವಿಲಂಬಿತ ಲಯವು ಮೊದಲಿಗೆ, ಮಧ್ಯದಲ್ಲಿ ಮತ್ತು ಅಂತಿಮ ಕ್ರಮದಲ್ಲಿ ಜರುಗುವುದು. ಮೃದಂಗದಲ್ಲಿ ಧೃತ್ ಲಯವನ್ನು ಆರಂಭದಲ್ಲಿ, ಹಾಗೆಯೇ ಕೊನೆಯಲ್ಲಿ ಮತ್ತು ಮಧ್ಯಲಯವನ್ನು ಅವುಗಳ ನಡುವೆ ಬಳಸುತ್ತಾರೆ. ಪಿಪಿಲಿಕಾದಲ್ಲಿ ವಿಲಂಬಿತ ಲಯವು ಆರಂಭದಲ್ಲಿ, ಕೊನೆಯಲ್ಲಿ ಜರುಗುತ್ತದೆ. ಮಧ್ಯಲಯವು ಮಧ್ಯ ಕ್ರಮದಲ್ಲಿ, ಆದ್ದರಿಂದ ಯತಿಯು ತಾಳಗಳ ದಶ ಪ್ರಾಣಗಳ ಮುಖ್ಯ ಅಂಶವಾಗಿದೆ.

ಯತಿಯಲ್ಲಿ ಎಷ್ಟು ರೀತಿಯಿದೆ?

1. 3
2. 5
3. 6
4. 8

**Options :**

485584134505. 1
485584134506. 2
485584134507. 3
485584134508. 4

**Question Number : 313 Question Id : 48558433628 Question Type : MCQ Option Shuffling : No Is Question Mandatory : No Calculator : None Response Time : N.A Think Time : N.A Minimum Instruction Time : 0**

**Correct Marks : 5 Wrong Marks : 1**

**Question Key Details :**

Key	Value
Comprehension	Comp3

There is a great importance of laya in Indian Talas. Laya has been categorised basically into three types - Vilambit, Madhya and Druta. The rule of application in various forms of laya is called 'Yati'. Yati denotes application of 'gati'. Yati has been classified into five types, Sama, Strotogata, Gopuchha, Mridanga and Pipilika. In sama yati, the same laya is used throughout, that is beginning to end. In strotogata, initially we use slow (vilambit) laya whereas Madhya occurs in the middle and Drut laya comes at the end. When it comes to Gopuchha, exactly inverse order of layas is put to application vis a vis strotogata meaning thereby in the later Druta, Madhya laya and Vilambit laya occurs in the first, middle and last order. In Mridanga, drut laya is used at the outset as well as at the end and Madhya laya is used amidst thereof. In Pipilika, vilambit laya occurs in the beginning, at the end while madhya laya is used in middle order, hence 'Yati' is an important aspect of tala's Das Pranas.

Read the above passage and answer the following questions:

Application of laya in Sama yati is:

1. Drut, Madhya, Drut
2. Madhya, Drut, Madhya
3. Same laya from beginning to end
4. Drut laya at the beginning and end, and vilambit laya in the middle

**Options :**

485584134509. 1
485584134510. 2
485584134511. 3
485584134512. 4

**Question Number : 313 Question Id : 48558433628 Question Type : MCQ Option Shuffling : No Is Question Mandatory : No Calculator : None Response Time : N.A Think Time : N.A Minimum Instruction Time : 0**

Correct Marks : 5 Wrong Marks : 1

Question Key Details :

Key	Value
Comprehension	Comp3

ಕೆಳಗಿನ ವಾಕ್ಯಪುಂಜವನ್ನು ಓದಿ ಮತ್ತು ಕೆಳಗಿನ ಪ್ರಶ್ನೆಗಳನ್ನು ಉತ್ತರಿಸಿ:

ಭಾರತೀಯ ತಾಳಗಳಲ್ಲಿ ಲಯಕ್ಕೆ ಬಹಳ ಮಹತ್ವವಿದೆ. ಮೂಲತಃ ಲಯವನ್ನು ವಿಲಂಬಿತ, ಮಧ್ಯ ಮತ್ತು ಧೃತ ಎಂದು ವಿಧಗಳಾಗಿ ವರ್ಗೀಕರಿಸಲಾಗಿದೆ. ವಿವಿಧ ರೀತಿಯ ಲಯದ ಅನ್ವಯಿಸುವಿಕೆ ನಿಯಮವನ್ನು 'ಯತಿ' ಎಂದು ಕರೆಯುತ್ತಾರೆ. ಯತಿಯು 'ಗತಿ'ಯ ಅನ್ವಯಿಸುವಿಕೆಯನ್ನು ಸೂಚಿಸುತ್ತದೆ. ಯತಿಯನ್ನು ಸಾಮ, ಸ್ತ್ರೋತೋಗತ, ಗೋಪುಚ್ಚ, ಮೃದಂಗ, ಮತ್ತು ಪಿಪಿಲಿಕ ಎಂಬ ಐದು ವಿಧಗಳಾಗಿ ವರ್ಗೀಕರಿಸಲಾಗಿದೆ. ಸಾಮಗತಿಯಲ್ಲಿ ಒಂದೇ ಲಯವನ್ನು ಮೊದಲಿನಿಂದ ಕೊನೆಯವರೆಗೂ ಬಳಸುತ್ತಾರೆ. ಸ್ತ್ರೋತಗತದಲ್ಲಿ ಪ್ರಾರಂಭದಲ್ಲಿ ನಿಧಾನ (ವಿಲಂಬಿತ) ಲಯವನ್ನು ಆದರೆ, ಮಧ್ಯ ಜರುಗುವುದು ಮಧ್ಯದಲ್ಲಿ ಮತ್ತು ಧೃತ ಲಯವು ಕೊನೆಯಲ್ಲಿ ಬರುತ್ತದೆ. ಗೋಪುಚ್ಚಕ್ಕೆ ಬಂದಾಗ, ಸರಿಯಾಗಿ ಲಯದ ವಿಲೋಮ ಕ್ರಮದಲ್ಲಿ ಸ್ತ್ರೋತಗತಗ ಸಂಬಂಧಿಸಿದಂತೆ ಅನ್ವಯಿಸುತ್ತಾರೆ. ಅರ್ಧವೇನೆಂದರೆ, ಅಂತಿಮ ಧೃತ, ಮಧ್ಯ ಲಯ ಮತ್ತು ವಿಲಂಬಿತ ಲಯವು ಮೊದಲಿಗೆ, ಮಧ್ಯದಲ್ಲಿ ಮತ್ತು ಅಂತಿಮ ಕ್ರಮದಲ್ಲಿ ಜರುಗುವುದು. ಮೃದಂಗದಲ್ಲಿ ಧೃತ ಲಯವನ್ನು ಆರಂಭದಲ್ಲಿ, ಹಾಗೆಯೇ ಕೊನೆಯಲ್ಲಿ ಮತ್ತು ಮಧ್ಯಲಯವನ್ನು ಅವುಗಳ ನಡುವೆ ಬಳಸುತ್ತಾರೆ. ಪಿಪಿಲಿಕಾದಲ್ಲಿ ವಿಲಂಬಿತ ಲಯವು ಆರಂಭದಲ್ಲಿ, ಕೊನೆಯಲ್ಲಿ ಜರುಗುತ್ತದೆ. ಮಧ್ಯಲಯವು ಮಧ್ಯ ಕ್ರಮದಲ್ಲಿ, ಆದ್ದರಿಂದ ಯತಿಯು ತಾಳಗಳ ದಶ ಪ್ರಾಣಗಳ ಮುಖ್ಯ ಅಂಶವಾಗಿದೆ.

ಸಾಮ ಯತಿಯಲ್ಲಿ ಲಯ ಅನ್ವಯಿಸುವುದು:

1. ಧೃತ, ಮಧ್ಯ, ಧೃತ
2. ಮಧ್ಯ, ಧೃತ, ಮಧ್ಯ
3. ಆರಂಭದಿಂದ ಕೊನೆಯವರೆಗೂ ಒಂದೇ ಲಯ
4. ಆರಂಭ ಮತ್ತು ಕೊನೆಯಲ್ಲಿ ಧೃತ ಲಯ ಮತ್ತು ಮಧ್ಯದಲ್ಲಿ ವಿಲಂಬಿತ ಲಯ

Options :

485584134509. 1

485584134510. 2

485584134511. 3

485584134512. 4

Question Number : 314 Question Id : 48558433629 Question Type : MCQ Option Shuffling : No Is Question Mandatory : No Calculator : None Response Time : N.A Think Time : N.A Minimum Instruction Time : 0

Correct Marks : 5 Wrong Marks : 1

Question Key Details :

Key	Value
Comprehension	Comp3

There is a great importance of laya in Indian Talas. Laya has been categorised basically into three types - Vilambit, Madhya and Druta. The rule of application in various forms of laya is called 'Yati'. Yati denotes application of 'gati'. Yati has been classified into five types, Sama, Strotogata, Gopuchha, Mridanga and Pipilika. In sama yati, the same laya is used throughout, that is beginning to end. In strotogata, initially we use slow (vilambit) laya whereas Madhya occurs in the middle and Drut laya comes at the end. When it comes to Gopuchha, exactly inverse order of layas is put to application vis a vis strotogata meaning thereby in the later Druta, Madhya laya and Vilambit laya occurs in the first, middle and last order. In Mridanga, drut laya is used at the outset as well as at the end and Madhya laya is used amidst thereof. In Pipilika, vilambit laya occurs in the beginning, at the end while madhya laya is used in middle order, hence 'Yati' is an important aspect of tala's Das Pranas.

Read the above passage and answer the following questions:

Drut in the beginning and end, and Madhya laya in the middle is:

1. Sama
2. Pipilika
3. Gopuccha
4. Mridanga

**Options :**

485584134513. 1  
485584134514. 2  
485584134515. 3  
485584134516. 4

**Question Number : 314 Question Id : 48558433629 Question Type : MCQ Option Shuffling : No Is Question Mandatory : No Calculator : None Response Time : N.A Think Time : N.A Minimum Instruction Time : 0**

**Correct Marks : 5 Wrong Marks : 1**

**Question Key Details :**

Key	Value
Comprehension	Comp3

ಕೆಳಗಿನ ವಾಕ್ಯಪುಂಜವನ್ನು ಓದಿ ಮತ್ತು ಕೆಳಗಿನ ಪ್ರಶ್ನೆಗಳನ್ನು ಉತ್ತರಿಸಿ:

ಭಾರತೀಯ ತಾಳಗಳಲ್ಲಿ ಲಯಕ್ಕೆ ಬಹಳ ಮಹತ್ವವಿದೆ. ಮೂಲತಃ ಲಯವನ್ನು ವಿಲಂಬಿತ, ಮಧ್ಯ ಮತ್ತು ಧೃತ ಎಂದು ವಿಧಗಳಾಗಿ ವರ್ಗೀಕರಿಸಲಾಗಿದೆ. ವಿವಿಧ ರೀತಿಯ ಲಯದ ಅನ್ವಯಿಸುವಿಕೆ ನಿಯಮವನ್ನು 'ಯತಿ' ಎಂದು ಕರೆಯುತ್ತಾರೆ. ಯತಿಯು 'ಗತಿ'ಯ ಅನ್ವಯಿಸುವಿಕೆಯನ್ನು ಸೂಚಿಸುತ್ತದೆ. ಯತಿಯನ್ನು ಸಾಮ, ಸ್ತ್ರೋತೋಗತ, ಗೋಪುಚ್ಚ, ಮೃದಂಗ, ಮತ್ತು ಪಿಪಿಲಿಕ ಎಂಬ ಐದು ವಿಧಗಳಾಗಿ ವರ್ಗೀಕರಿಸಲಾಗಿದೆ. ಸಾಮಗತಿಯಲ್ಲಿ ಒಂದೇ ಲಯವನ್ನು ಮೊದಲಿನಿಂದ ಕೊನೆಯವರೆಗೂ ಬಳಸುತ್ತಾರೆ. ಸ್ತ್ರೋತಗತದಲ್ಲಿ ಪ್ರಾರಂಭದಲ್ಲಿ ನಿಧಾನ (ವಿಲಂಬಿತ) ಲಯವನ್ನು ಆದರೆ, ಮಧ್ಯ ಜರುಗುವುದು ಮಧ್ಯದಲ್ಲಿ ಮತ್ತು ಧೃತ್ ಲಯವು ಕೊನೆಯಲ್ಲಿ ಬರುತ್ತದೆ. ಗೋಪುಚ್ಚಕ್ಕೆ ಬಂದಾಗ, ಸರಿಯಾಗಿ ಲಯದ ವಿಲೋಮ ಕ್ರಮದಲ್ಲಿ ಸ್ತ್ರೋತಗತಗ ಸಂಬಂಧಿಸಿದಂತೆ ಅನ್ವಯಿಸುತ್ತಾರೆ. ಅರ್ಥವೇನೆಂದರೆ, ಅಂತಿಮ ಧೃತ್, ಮಧ್ಯ ಲಯ ಮತ್ತು ವಿಲಂಬಿತ ಲಯವು ಮೊದಲಿಗೆ, ಮಧ್ಯದಲ್ಲಿ ಮತ್ತು ಅಂತಿಮ ಕ್ರಮದಲ್ಲಿ ಜರುಗುವುದು. ಮೃದಂಗದಲ್ಲಿ ಧೃತ್ ಲಯವನ್ನು ಆರಂಭದಲ್ಲಿ, ಹಾಗೆಯೇ ಕೊನೆಯಲ್ಲಿ ಮತ್ತು ಮಧ್ಯಲಯವನ್ನು ಅವುಗಳ ನಡುವೆ ಬಳಸುತ್ತಾರೆ. ಪಿಪಿಲಿಕಾದಲ್ಲಿ ವಿಲಂಬಿತ ಲಯವು ಆರಂಭದಲ್ಲಿ, ಕೊನೆಯಲ್ಲಿ ಜರುಗುತ್ತದೆ. ಮಧ್ಯಲಯವು ಮಧ್ಯ ಕ್ರಮದಲ್ಲಿ, ಆದ್ದರಿಂದ ಯತಿಯು ತಾಳಗಳ ದಶ ಪ್ರಾಣಗಳ ಮುಖ್ಯ ಅಂಶವಾಗಿದೆ.

ಧೃತ್ ಲಯವು ಆರಂಭದಲ್ಲಿ ಮತ್ತು ಕೊನೆಯಲ್ಲಿ, ಮತ್ತು ಮಧ್ಯ ಲಯವು ಮಧ್ಯದಲ್ಲಿರುವುದು:

1. ಸಾಮ
2. ಪಿಪಿಲಿಕ
3. ಗೋಪುಚ್ಛ
4. ಮೃದಂಗ

**Options :**

485584134513. 1  
485584134514. 2  
485584134515. 3  
485584134516. 4

**Question Number : 315 Question Id : 48558433630 Question Type : MCQ Option Shuffling : No Is Question Mandatory : No Calculator : None Response Time : N.A Think Time : N.A Minimum Instruction Time : 0**

**Correct Marks : 5 Wrong Marks : 1**

**Question Key Details :**

Key	Value
Comprehension	Comp3

There is a great importance of laya in Indian Talas. Laya has been categorised basically into three types - Vilambit, Madhya and Druta. The rule of application in various forms of laya is called 'Yati'. Yati denotes application of 'gati'. Yati has been classified into five types, Sama, Strotogata, Gopuchha, Mridanga and Pipilika. In sama yati, the same laya is used throughout, that is beginning to end. In strotogata, initially we use slow (vilambit) laya whereas Madhya occurs in the middle and Drut laya comes at the end. When it comes to Gopuchha, exactly inverse order of layas is put to application vis a vis strotogata meaning thereby in the later Druta, Madhya laya and Vilambit laya occurs in the first, middle and last order. In Mridanga, drut laya is used at the outset as well as at the end and Madhya laya is used amidst thereof. In Pipilika, vilambit laya occurs in the beginning, at the end while madhya laya is used in middle order, hence 'Yati' is an important aspect of tala's Das Pranas.

Read the above passage and answer the following questions:

The sequence of laya in strotogata is:

1. Vilambit - Madhya - Drut
2. Drut - Madhya - Drut
3. Drut - Drut - Madhya
4. Madhya - Vilambit - Drut

**Options :**

485584134517. 1  
485584134518. 2  
485584134519. 3  
485584134520. 4

Question Number : 315 Question Id : 48558433630 Question Type : MCQ Option Shuffling : No Is Question Mandatory : No Calculator : None Response Time : N.A Think Time : N.A Minimum Instruction Time : 0

Correct Marks : 5 Wrong Marks : 1

Question Key Details :

Key	Value
Comprehension	Comp3

ಕೆಳಗಿನ ವಾಕ್ಯಪುಂಜವನ್ನು ಓದಿ ಮತ್ತು ಕೆಳಗಿನ ಪ್ರಶ್ನೆಗಳನ್ನು ಉತ್ತರಿಸಿ:

ಭಾರತೀಯ ತಾಳಗಳಲ್ಲಿ ಲಯಕ್ಕೆ ಬಹಳ ಮಹತ್ವವಿದೆ. ಮೂಲತಃ ಲಯವನ್ನು ವಿಲಂಬಿತ, ಮಧ್ಯ ಮತ್ತು ಧೃತ ಎಂದು ವಿಧಗಳಾಗಿ ವರ್ಗೀಕರಿಸಲಾಗಿದೆ. ವಿವಿಧ ರೀತಿಯ ಲಯದ ಅನ್ವಯಿಸುವಿಕೆ ನಿಯಮವನ್ನು 'ಯತಿ' ಎಂದು ಕರೆಯುತ್ತಾರೆ. ಯತಿಯು 'ಗತಿ'ಯ ಅನ್ವಯಿಸುವಿಕೆಯನ್ನು ಸೂಚಿಸುತ್ತದೆ. ಯತಿಯನ್ನು ಸಾಮ, ಸ್ತ್ರೋತೋಗತ, ಗೋಪುಚ್ಚ, ಮೃದಂಗ, ಮತ್ತು ಪಿಪಿಲಿಕ ಎಂಬ ಐದು ವಿಧಗಳಾಗಿ ವರ್ಗೀಕರಿಸಲಾಗಿದೆ. ಸಾಮಗತಿಯಲ್ಲಿ ಒಂದೇ ಲಯವನ್ನು ಮೊದಲಿನಿಂದ ಕೊನೆಯವರೆಗೂ ಬಳಸುತ್ತಾರೆ. ಸ್ತ್ರೋತಗತದಲ್ಲಿ ಪ್ರಾರಂಭದಲ್ಲಿ ನಿಧಾನ (ವಿಲಂಬಿತ) ಲಯವನ್ನು ಆದರೆ, ಮಧ್ಯ ಜರುಗುವುದು ಮಧ್ಯದಲ್ಲಿ ಮತ್ತು ಧೃತ ಲಯವು ಕೊನೆಯಲ್ಲಿ ಬರುತ್ತದೆ. ಗೋಪುಚ್ಚಕ್ಕೆ ಬಂದಾಗ, ಸರಿಯಾಗಿ ಲಯದ ವಿಲೋಮ ಕ್ರಮದಲ್ಲಿ ಸ್ತ್ರೋತಗತಗ ಸಂಬಂಧಿಸಿದಂತೆ ಅನ್ವಯಿಸುತ್ತಾರೆ. ಅರ್ಧವೇನೆಂದರೆ, ಅಂತಿಮ ಧೃತ, ಮಧ್ಯ ಲಯ ಮತ್ತು ವಿಲಂಬಿತ ಲಯವು ಮೊದಲಿಗೆ, ಮಧ್ಯದಲ್ಲಿ ಮತ್ತು ಅಂತಿಮ ಕ್ರಮದಲ್ಲಿ ಜರುಗುವುದು. ಮೃದಂಗದಲ್ಲಿ ಧೃತ ಲಯವನ್ನು ಆರಂಭದಲ್ಲಿ, ಹಾಗೆಯೇ ಕೊನೆಯಲ್ಲಿ ಮತ್ತು ಮಧ್ಯಲಯವನ್ನು ಅವುಗಳ ನಡುವೆ ಬಳಸುತ್ತಾರೆ. ಪಿಪಿಲಿಕಾದಲ್ಲಿ ವಿಲಂಬಿತ ಲಯವು ಆರಂಭದಲ್ಲಿ, ಕೊನೆಯಲ್ಲಿ ಜರುಗುತ್ತದೆ. ಮಧ್ಯಲಯವು ಮಧ್ಯ ಕ್ರಮದಲ್ಲಿ, ಆದ್ದರಿಂದ ಯತಿಯು ತಾಳಗಳ ದಶ ಪ್ರಾಣಗಳ ಮುಖ್ಯ ಅಂಶವಾಗಿದೆ.

ಸ್ತ್ರೋತೋಗತದಲ್ಲಿ ಲಯಗಳ ಅನುಕ್ರಮಣಿಕೆಯು

1. ವಿಲಂಬಿತ - ಮಧ್ಯ - ಧೃತ
2. ಧೃತ - ಮಧ್ಯ - ಧೃತ
3. ಧೃತ - ಧೃತ - ಮಧ್ಯ
4. ಮಧ್ಯ - ವಿಲಂಬಿತ - ಧೃತ

Options :

485584134517. 1  
485584134518. 2  
485584134519. 3  
485584134520. 4

Sub-Section Number :

4

Sub-Section Id :

4855842437

Question Shuffling Allowed :

No

Is Section Default? :

null

Question Number : 316 Question Id : 48558433631 Question Type : MCQ Option Shuffling : No Is Question Mandatory : No Calculator : None Response Time : N.A Think Time : N.A Minimum Instruction Time : 0

Correct Marks : 5 Wrong Marks : 1

Question Key Details :

Key	Value
Comprehension	Comp4

Read the following passage and answer the questions given below:

### Sangeet Natak Akademi (SNA)

The SNA was established on 31 May 1952. In his speech at the inauguration on 28 January 1953, Maulana Azad (1888-1958), then Union Minister for Education and later founder of the Indian Council for Cultural Relations (ICCR), said that the aim of the SNA was to 'preserve our traditions by offering them an institutional form'.

The SNA's mission, stated in its Memorandum of Association is:

To promote research in the fields of Indian music, dance and drama and for this purpose to establish a library and a museum; to encourage the exchange of ideas and enrichment of techniques between the different regions in regard to the arts of music, dance and drama; to publish research on Indian performing arts; to revive and preserve folk traditions in different regions; to sponsor and encourage festival, seminars and conferences; to give recognition to individual artists for outstanding achievement; to foster cultural contacts between different regions of the country and with other countries; and to cooperate with similar Akademis, institutions and associations for the furtherance of these objectives

With respect to theatre, the SNA holds workshops for playwrights; funds interstate cultural exchange programmes; funds research in the traditional performing arts; offers financial support to cultural institutions; organizes festivals of modern theatre, traditional performance, shadow theatre, marionette theatre and other forms of puppetry; gives awards and fellowship to distinguished artists; collects audiotapes, videos and photographs; and maintains an audiovisual archive as well as a library.

When was the Sangeet Natak Akademi inaugurated?

1. 1952
2. 1953
3. 1954
4. 1950

**Options :**

- 485584134521. 1
- 485584134522. 2
- 485584134523. 3
- 485584134524. 4

**Question Number : 316 Question Id : 48558433631 Question Type : MCQ Option Shuffling : No Is Question Mandatory : No Calculator : None Response Time : N.A Think Time : N.A Minimum Instruction Time : 0**

**Correct Marks : 5 Wrong Marks : 1**

**Question Key Details :**

Key	Value
Comprehension	Comp4



ಕೆಳಗಿನ ವಾಕ್ಯಪುಂಜವನ್ನು ಓದಿ ಮತ್ತು ಕೆಳಗಿನ ಪ್ರಶ್ನೆಗಳನ್ನು ಉತ್ತರಿಸಿ:

### ಸಂಗೀತ ನಾಟಕ ಅಕಾಡೆಮಿ (SNA)

SNA ಯನ್ನು 1952ರ ಮೇ 31ರಂದು ಸ್ಥಾಪಿಸಲಾಯಿತು. 1953ರ ಜನವರಿ 28ರಂದು ಇದರ ಉದ್ಘಾಟನೆಯಲ್ಲಿ ಕೇಂದ್ರ ಸಂಪುಟದ ಶಿಕ್ಷಣ ಸಚಿವರು ಮತ್ತು ನಂತರದಲ್ಲಿ ಭಾರತೀಯ ಸಾಂಸ್ಕೃತಿಕ ಸಂಬಂಧಗಳ ಮಂಡಳಿಯ (ICCR) ಸಂಸ್ಥಾಪಕರಾದ ಮೌಲಾನಾ ಆಜಾದ (1898-1958) ರವರು ತಮ್ಮ ನುಡಿಯಲ್ಲಿ SNA ಯ ಗುರಿಯು “ನಮ್ಮ ಸಂಪ್ರದಾಯಗಳನ್ನು ಸಾಂಸ್ಥಿಕ ರೂಪದಲ್ಲಿ ಪರಿಗಣಿಸಿ ಸಂರಕ್ಷಿಸಬೇಕು” ಎಂದು ಹೇಳಿದರು.

SNA ಯ ಧ್ಯೇಯವನ್ನು ತಮ್ಮ ಸಂಘಟನೆಯ ಜ್ಞಾಪಕ ಪತ್ರದಲ್ಲಿ ಹೇಳಲಾಗಿರುವುದು:

ಭಾರತೀಯ ಸಂಗೀತ, ನೃತ್ಯ ಮತ್ತು ನಾಟಕ ಕ್ಷೇತ್ರಗಳಲ್ಲಿ ಸಂಶೋಧನೆಯನ್ನು ಉತ್ತೇಜಿಸಲು ಮತ್ತು ಈ ಉದ್ದೇಶಕ್ಕೆ ಒಂದು ಗ್ರಂಥಾಲಯ ಮತ್ತು ಮ್ಯೂಸಿಯಂಗಳನ್ನು ಸ್ಥಾಪಿಸಬೇಕು; ಸಲಹೆಗಳ ವಿನಿಮಯವನ್ನು ಉತ್ತೇಜಿಸಲು ಮತ್ತು ಸಂಗೀತ, ಕಲೆ, ನೃತ್ಯ ಮತ್ತು ನಾಟಕಗಳ ವಿವಿಧ ಕ್ಷೇತ್ರಗಳ ನಡುವಿನ ತಾಂತ್ರಿಕತೆಯನ್ನು ಶ್ರೀಮಂತಪಡಿಸಲು; ಭಾರತೀಯ ಕಲೆಗಳ ಮೇಲೆ ಸಂಶೋಧನೆಯನ್ನು ಪ್ರಕಟಿಸಲು; ವಿವಿಧ ಪ್ರದೇಶಗಳಲ್ಲಿನ ಜಾನಪದ ಸಂಪ್ರದಾಯಗಳನ್ನು ಪುನರುಜ್ಜೀವನಗೊಳಿಸುವುದು ಮತ್ತು ಸಂರಕ್ಷಿಸುವುದು; ಹಬ್ಬಗಳು, ಸಭೆ ಮತ್ತು ಸಮ್ಮೇಳನಗಳನ್ನು ಪ್ರಾಯೋಜಿಸಿ ಮತ್ತು ಉತ್ತೇಜಿಸುವುದು; ಪ್ರತಿಯೊಬ್ಬ ಕಲಾವಿದರಿಗೂ ಅವರ ಅಪ್ರತಿಮ ಸಾಧನೆಗಳಿಗೆ ಮಾನ್ಯತೆ ನೀಡುವುದು; ದೇಶದ ವಿವಿಧ ಪ್ರದೇಶಗಳ ನಡುವಿನ ಸಾಂಸ್ಕೃತಿಕ ಸಂಪರ್ಕಗಳನ್ನು ಇತರ ದೇಶಗಳೊಂದಿಗೆ ಬೆಳೆಸುವುದು; ಮತ್ತು ಉದ್ದೇಶಗಳ ಮುಂದುವರಿಕೆಗಾಗಿ ಸಮನಾದ ಅಕಾಡೆಮಿಗಳು, ಸಂಸ್ಥೆಗಳು ಮತ್ತು ಸಂಘಟನೆಗಳೊಂದಿಗೆ ಸಹಕರಿಸುವುದು.

ರಂಗಭೂಮಿಗೆ ಸಂಬಂಧಿಸಿದಂತೆ SNA ನಾಟಕ ರಚನೆಗಾರರಿಗೆ ಕಾರ್ಯಾಗಾರಗಳನ್ನು ಏರ್ಪಡಿಸುವುದು; ಅಂತರರಾಜ್ಯ ಸಾಂಸ್ಕೃತಿಕ ವಿನಿಮಯ ಕಾರ್ಯಕ್ರಮಗಳಿಗೆ ಹಣಕಾಸು ಒದಗಿಸುವುದು; ಸಾಂಪ್ರದಾಯಿಕ ಪ್ರದರ್ಶನ ಕಲೆಗಳ ಸಂಶೋಧನೆಗೆ ಹಣಕಾಸು ಒದಗಿಸುವುದು, ಸಾಂಸ್ಕೃತಿಕ ಸಂಸ್ಥೆಗಳಿಗೆ ಹಣಕಾಸು ಸಹಾಯ ಮಾಡುವುದು; ಆಧುನಿಕ ರಂಗಭೂಮಿಯ, ಸಾಂಪ್ರದಾಯಿಕ ಪ್ರದರ್ಶನ, ಅಭೌತ (Shadow), ರಂಗಭೂಮಿ, ಸೂತ್ರಗೊಂಬೆ ರಂಗಭೂಮಿ ಮತ್ತು ಇತರೆ ಬೊಂಬೆಯಾಟ ಹಬ್ಬಗಳನ್ನು ಏರ್ಪಡಿಸುವುದು, ಗುರುತಿಸಿಕೊಂಡ ಕಲಾವಿದರಿಗೆ ಬಹುಮಾನ ಮತ್ತು ಶಿಷ್ಯವೇತನ ನೀಡುವುದು; ಧ್ವನಿಮುದ್ರಣಗಳು, ವೀಡಿಯೋಗಳು ಮತ್ತು ಛಾಯಾಚಿತ್ರಗಳನ್ನು ಸಂಗ್ರಹಿಸುವುದು; ಮತ್ತು ಶ್ರವಣ ದೃಶ್ಯ ಪತ್ರಗಾರಗಳನ್ನು ಮತ್ತು ಗ್ರಂಥಾಲಯಗಳನ್ನು ಸಹ ನಿರ್ವಹಿಸುವುದು.

ಸಂಗೀತ ನಾಟಕ ಅಕಾಡೆಮಿ ಉದ್ಘಾಟನೆಗೊಂಡಿದ್ದು ಯಾವಾಗ?

1. 1952
2. 1953
3. 1954
4. 1950

#### Options :

485584134521. 1  
485584134522. 2  
485584134523. 3  
485584134524. 4

Question Number : 317 Question Id : 48558433632 Question Type : MCQ Option Shuffling : No Is Question Mandatory : No Calculator : None Response Time : N.A Think Time : N.A Minimum Instruction Time : 0

Correct Marks : 5 Wrong Marks : 1

#### Question Key Details :

Key	Value
Comprehension	Comp4

Read the following passage and answer the questions given below:

### Sangeet Natak Akademi (SNA)

The SNA was established on 31 May 1952. In his speech at the inauguration on 28 January 1953, Maulana Azad (1888-1958), then Union Minister for Education and later founder of the Indian Council for Cultural Relations (ICCR), said that the aim of the SNA was to 'preserve our traditions by offering them an institutional form'.

The SNA's mission, stated in its Memorandum of Association is:

To promote research in the fields of Indian music, dance and drama and for this purpose to establish a library and a museum; to encourage the exchange of ideas and enrichment of techniques between the different regions in regard to the arts of music, dance and drama; to publish research on Indian performing arts; to revive and preserve folk traditions in different regions; to sponsor and encourage festival, seminars and conferences; to give recognition to individual artists for outstanding achievement; to foster cultural contacts between different regions of the country and with other countries; and to cooperate with similar Akademis, institutions and associations for the furtherance of these objectives

With respect to theatre, the SNA holds workshops for playwrights; funds interstate cultural exchange programmes; funds research in the traditional performing arts; offers financial support to cultural institutions; organizes festivals of modern theatre, traditional performance, shadow theatre, marionette theatre and other forms of puppetry; gives awards and fellowship to distinguished artists; collects audiotapes, videos and photographs; and maintains an audiovisual archive as well as a library.

Who among the following was independent India's first Union Minister for Education?

1. Babasaheb Ambedkar
2. Sardar Vallabhbhai Patel
3. Maulana Azad
4. Rajendra Prasad

#### Options :

485584134525. 1  
485584134526. 2  
485584134527. 3  
485584134528. 4

**Question Number : 317 Question Id : 48558433632 Question Type : MCQ Option Shuffling : No Is Question Mandatory : No Calculator : None Response Time : N.A Think Time : N.A Minimum Instruction Time : 0**

**Correct Marks : 5 Wrong Marks : 1**

#### Question Key Details :

Key	Value
Comprehension	Comp4

ಕೆಳಗಿನ ವಾಕ್ಯಪುಂಜವನ್ನು ಓದಿ ಮತ್ತು ಕೆಳಗಿನ ಪ್ರಶ್ನೆಗಳನ್ನು ಉತ್ತರಿಸಿ:

### ಸಂಗೀತ ನಾಟಕ ಅಕಾಡೆಮಿ (SNA)

SNA ಯನ್ನು 1952ರ ಮೇ 31ರಂದು ಸ್ಥಾಪಿಸಲಾಯಿತು. 1953ರ ಜನವರಿ 28ರಂದು ಇದರ ಉದ್ಘಾಟನೆಯಲ್ಲಿ ಕೇಂದ್ರ ಸಂಪುಟದ ಶಿಕ್ಷಣ ಸಚಿವರು ಮತ್ತು ನಂತರದಲ್ಲಿ ಭಾರತೀಯ ಸಾಂಸ್ಕೃತಿಕ ಸಂಬಂಧಗಳ ಮಂಡಳಿಯ (ICCR) ಸಂಸ್ಥಾಪಕರಾದ ಮೌಲಾನಾ ಆಜಾದ್ (1898-1958) ರವರು ತಮ್ಮ ನುಡಿಯಲ್ಲಿ SNA ಯ ಗುರಿಯು “ನಮ್ಮ ಸಂಪ್ರದಾಯಗಳನ್ನು ಸಾಂಸ್ಥಿಕ ರೂಪದಲ್ಲಿ ಪರಿಗಣಿಸಿ ಸಂರಕ್ಷಿಸಬೇಕು” ಎಂದು ಹೇಳಿದರು.

SNA ಯ ಧ್ಯೇಯವನ್ನು ತಮ್ಮ ಸಂಘಟನೆಯ ಜ್ಞಾಪಕ ಪತ್ರದಲ್ಲಿ ಹೇಳಲಾಗಿರುವುದು:

ಭಾರತೀಯ ಸಂಗೀತ, ನೃತ್ಯ ಮತ್ತು ನಾಟಕ ಕ್ಷೇತ್ರಗಳಲ್ಲಿ ಸಂಶೋಧನೆಯನ್ನು ಉತ್ತೇಜಿಸಲು ಮತ್ತು ಈ ಉದ್ದೇಶಕ್ಕೆ ಒಂದು ಗ್ರಂಥಾಲಯ ಮತ್ತು ಮ್ಯೂಸಿಯಂಗಳನ್ನು ಸ್ಥಾಪಿಸಬೇಕು; ಸಲಹೆಗಳ ವಿನಿಮಯವನ್ನು ಉತ್ತೇಜಿಸಲು ಮತ್ತು ಸಂಗೀತ, ಕಲೆ, ನೃತ್ಯ ಮತ್ತು ನಾಟಕಗಳ ವಿವಿಧ ಕ್ಷೇತ್ರಗಳ ನಡುವಿನ ತಾಂತ್ರಿಕತೆಯನ್ನು ಶ್ರೀಮಂತಪಡಿಸಲು; ಭಾರತೀಯ ಕಲೆಗಳ ಮೇಲೆ ಸಂಶೋಧನೆಯನ್ನು ಪ್ರಕಟಿಸಲು; ವಿವಿಧ ಪ್ರದೇಶಗಳಲ್ಲಿನ ಜಾನಪದ ಸಂಪ್ರದಾಯಗಳನ್ನು ಪುನರುಜ್ಜೀವನಗೊಳಿಸುವುದು ಮತ್ತು ಸಂರಕ್ಷಿಸುವುದು; ಹಬ್ಬಗಳು, ಸಭೆ ಮತ್ತು ಸಮ್ಮೇಳನಗಳನ್ನು ಪ್ರಾಯೋಜಿಸಿ ಮತ್ತು ಉತ್ತೇಜಿಸುವುದು; ಪ್ರತಿಯೊಬ್ಬ ಕಲಾವಿದರಿಗೂ ಅವರ ಅಪ್ರತಿಮ ಸಾಧನೆಗಳಿಗೆ ಮಾನ್ಯತೆ ನೀಡುವುದು; ದೇಶದ ವಿವಿಧ ಪ್ರದೇಶಗಳ ನಡುವಿನ ಸಾಂಸ್ಕೃತಿಕ ಸಂಪರ್ಕಗಳನ್ನು ಇತರ ದೇಶಗಳೊಂದಿಗೆ ಬೆಳೆಸುವುದು; ಮತ್ತು ಉದ್ದೇಶಗಳ ಮುಂದುವರಿಕೆಗಾಗಿ ಸಮನಾದ ಅಕಾಡೆಮಿಗಳು, ಸಂಸ್ಥೆಗಳು ಮತ್ತು ಸಂಘಟನೆಗಳೊಂದಿಗೆ ಸಹಕರಿಸುವುದು.

ರಂಗಭೂಮಿಗೆ ಸಂಬಂಧಿಸಿದಂತೆ SNA ನಾಟಕ ರಚನೆಗಾರರಿಗೆ ಕಾರ್ಯಾಗಾರಗಳನ್ನು ಏರ್ಪಡಿಸುವುದು; ಅಂತರರಾಜ್ಯ ಸಾಂಸ್ಕೃತಿಕ ವಿನಿಮಯ ಕಾರ್ಯಕ್ರಮಗಳಿಗೆ ಹಣಕಾಸು ಒದಗಿಸುವುದು; ಸಾಂಪ್ರದಾಯಿಕ ಪ್ರದರ್ಶನ ಕಲೆಗಳ ಸಂಶೋಧನೆಗೆ ಹಣಕಾಸು ಒದಗಿಸುವುದು, ಸಾಂಸ್ಕೃತಿಕ ಸಂಸ್ಥೆಗಳಿಗೆ ಹಣಕಾಸು ಸಹಾಯ ಮಾಡುವುದು; ಆಧುನಿಕ ರಂಗಭೂಮಿಯ, ಸಾಂಪ್ರದಾಯಿಕ ಪ್ರದರ್ಶನ, ಅಭೌತ (Shadow), ರಂಗಭೂಮಿ, ಸೂತ್ರಗೊಂಬೆ ರಂಗಭೂಮಿ ಮತ್ತು ಇತರೆ ಬೊಂಬೆಯಾಟ ಹಬ್ಬಗಳನ್ನು ಏರ್ಪಡಿಸುವುದು, ಗುರುತಿಸಿಕೊಂಡ ಕಲಾವಿದರಿಗೆ ಬಹುಮಾನ ಮತ್ತು ಶಿಷ್ಯವೇತನ ನೀಡುವುದು; ಧ್ವನಿಮುದ್ರಣಗಳು, ವೀಡಿಯೋಗಳು ಮತ್ತು ಛಾಯಾಚಿತ್ರಗಳನ್ನು ಸಂಗ್ರಹಿಸುವುದು; ಮತ್ತು ಶ್ರವಣ ದೃಶ್ಯ ಪತ್ರಗಾರಗಳನ್ನು ಮತ್ತು ಗ್ರಂಥಾಲಯಗಳನ್ನು ಸಹ ನಿರ್ವಹಿಸುವುದು.

ಕೆಳಗಿನವರುಗಳಲ್ಲಿ ಸ್ವತಂತ್ರ ಭಾರತದ ಪ್ರಥಮ ಕೇಂದ್ರ ಶಿಕ್ಷಣ ಮಂತ್ರಿ ಯಾರು?

1. ಬಾಬಾಸಾಹೇಬ್ ಅಂಬೇಡ್ಕರ್
2. ಸರ್ದಾರ್ ವಲ್ಲಭಭಾಯಿ ಪಟೇಲ್
3. ಮೌಲಾನಾ ಆಜಾದ್
4. ರಾಜೇಂದ್ರ ಪ್ರಸಾದ್

#### Options :

485584134525. 1  
485584134526. 2  
485584134527. 3  
485584134528. 4

Question Number : 318 Question Id : 48558433633 Question Type : MCQ Option Shuffling : No Is Question Mandatory : No Calculator : None Response Time : N.A Think Time : N.A Minimum Instruction Time : 0

Correct Marks : 5 Wrong Marks : 1

#### Question Key Details :

Key	Value
Comprehension	Comp4

Read the following passage and answer the questions given below:

### Sangeet Natak Akademi (SNA)

The SNA was established on 31 May 1952. In his speech at the inauguration on 28 January 1953, Maulana Azad (1888-1958), then Union Minister for Education and later founder of the Indian Council for Cultural Relations (ICCR), said that the aim of the SNA was to 'preserve our traditions by offering them an institutional form'.

The SNA's mission, stated in its Memorandum of Association is:

To promote research in the fields of Indian music, dance and drama and for this purpose to establish a library and a museum; to encourage the exchange of ideas and enrichment of techniques between the different regions in regard to the arts of music, dance and drama; to publish research on Indian performing arts; to revive and preserve folk traditions in different regions; to sponsor and encourage festival, seminars and conferences; to give recognition to individual artists for outstanding achievement; to foster cultural contacts between different regions of the country and with other countries; and to cooperate with similar Akademis, institutions and associations for the furtherance of these objectives

With respect to theatre, the SNA holds workshops for playwrights; funds interstate cultural exchange programmes; funds research in the traditional performing arts; offers financial support to cultural institutions; organizes festivals of modern theatre, traditional performance, shadow theatre, marionette theatre and other forms of puppetry; gives awards and fellowship to distinguished artists; collects audiotapes, videos and photographs; and maintains an audiovisual archive as well as a library.

'To preserve our traditions by offering them an institutional form', was the aim of:

1. Indian Council for Cultural Relations
2. National School of Drama
3. Lalitkala Akademi
4. Sangeet Natak Akademi

#### Options :

485584134529. 1  
485584134530. 2  
485584134531. 3  
485584134532. 4

**Question Number : 318 Question Id : 48558433633 Question Type : MCQ Option Shuffling : No Is Question Mandatory : No Calculator : None Response Time : N.A Think Time : N.A Minimum Instruction Time : 0**

**Correct Marks : 5 Wrong Marks : 1**

#### Question Key Details :

Key	Value
Comprehension	Comp4

ಕೆಳಗಿನ ವಾಕ್ಯಪುಂಜವನ್ನು ಓದಿ ಮತ್ತು ಕೆಳಗಿನ ಪ್ರಶ್ನೆಗಳನ್ನು ಉತ್ತರಿಸಿ:

### ಸಂಗೀತ ನಾಟಕ ಅಕಾಡೆಮಿ (SNA)

SNA ಯನ್ನು 1952ರ ಮೇ 31ರಂದು ಸ್ಥಾಪಿಸಲಾಯಿತು. 1953ರ ಜನವರಿ 28ರಂದು ಇದರ ಉದ್ಘಾಟನೆಯಲ್ಲಿ ಕೇಂದ್ರ ಸಂಪುಟದ ಶಿಕ್ಷಣ ಸಚಿವರು ಮತ್ತು ನಂತರದಲ್ಲಿ ಭಾರತೀಯ ಸಾಂಸ್ಕೃತಿಕ ಸಂಬಂಧಗಳ ಮಂಡಳಿಯ (ICCR) ಸಂಸ್ಥಾಪಕರಾದ ಮೌಲಾನಾ ಆಜಾದ (1898-1958) ರವರು ತಮ್ಮ ನುಡಿಯಲ್ಲಿ SNA ಯ ಗುರಿಯು "ನಮ್ಮ ಸಂಪ್ರದಾಯಗಳನ್ನು ಸಾಂಸ್ಥಿಕ ರೂಪದಲ್ಲಿ ಪರಿಗಣಿಸಿ ಸಂರಕ್ಷಿಸಬೇಕು" ಎಂದು ಹೇಳಿದರು.

SNA ಯ ಧ್ಯೇಯವನ್ನು ತಮ್ಮ ಸಂಘಟನೆಯ ಜ್ಞಾಪಕ ಪತ್ರದಲ್ಲಿ ಹೇಳಲಾಗಿರುವುದು:

ಭಾರತೀಯ ಸಂಗೀತ, ನೃತ್ಯ ಮತ್ತು ನಾಟಕ ಕ್ಷೇತ್ರಗಳಲ್ಲಿ ಸಂಶೋಧನೆಯನ್ನು ಉತ್ತೇಜಿಸಲು ಮತ್ತು ಈ ಉದ್ದೇಶಕ್ಕೆ ಒಂದು ಗ್ರಂಥಾಲಯ ಮತ್ತು ಮ್ಯೂಸಿಯಂಗಳನ್ನು ಸ್ಥಾಪಿಸಬೇಕು; ಸಲಹೆಗಳ ವಿನಿಮಯವನ್ನು ಉತ್ತೇಜಿಸಲು ಮತ್ತು ಸಂಗೀತ, ಕಲೆ, ನೃತ್ಯ ಮತ್ತು ನಾಟಕಗಳ ವಿವಿಧ ಕ್ಷೇತ್ರಗಳ ನಡುವಿನ ತಾಂತ್ರಿಕತೆಯನ್ನು ಶ್ರೀಮಂತಪಡಿಸಲು; ಭಾರತೀಯ ಕಲೆಗಳ ಮೇಲೆ ಸಂಶೋಧನೆಯನ್ನು ಪ್ರಕಟಿಸಲು; ವಿವಿಧ ಪ್ರದೇಶಗಳಲ್ಲಿನ ಜಾನಪದ ಸಂಪ್ರದಾಯಗಳನ್ನು ಪುನರುಜ್ಜೀವನಗೊಳಿಸುವುದು ಮತ್ತು ಸಂರಕ್ಷಿಸುವುದು; ಹಬ್ಬಗಳು, ಸಭೆ ಮತ್ತು ಸಮ್ಮೇಳನಗಳನ್ನು ಪ್ರಾಯೋಜಿಸಿ ಮತ್ತು ಉತ್ತೇಜಿಸುವುದು; ಪ್ರತಿಯೊಬ್ಬ ಕಲಾವಿದರಿಗೂ ಅವರ ಅಪ್ರತಿಮ ಸಾಧನೆಗಳಿಗೆ ಮಾನ್ಯತೆ ನೀಡುವುದು; ದೇಶದ ವಿವಿಧ ಪ್ರದೇಶಗಳ ನಡುವಿನ ಸಾಂಸ್ಕೃತಿಕ ಸಂಪರ್ಕಗಳನ್ನು ಇತರ ದೇಶಗಳೊಂದಿಗೆ ಬೆಳೆಸುವುದು; ಮತ್ತು ಉದ್ದೇಶಗಳ ಮುಂದುವರಿಕೆಗಾಗಿ ಸಮನಾದ ಅಕಾಡೆಮಿಗಳು, ಸಂಸ್ಥೆಗಳು ಮತ್ತು ಸಂಘಟನೆಗಳೊಂದಿಗೆ ಸಹಕರಿಸುವುದು.

ರಂಗಭೂಮಿಗೆ ಸಂಬಂಧಿಸಿದಂತೆ SNA ನಾಟಕ ರಚನೆಗಾರರಿಗೆ ಕಾರ್ಯಾಗಾರಗಳನ್ನು ಏರ್ಪಡಿಸುವುದು; ಅಂತರರಾಜ್ಯ ಸಾಂಸ್ಕೃತಿಕ ವಿನಿಮಯ ಕಾರ್ಯಕ್ರಮಗಳಿಗೆ ಹಣಕಾಸು ಒದಗಿಸುವುದು; ಸಾಂಪ್ರದಾಯಿಕ ಪ್ರದರ್ಶನ ಕಲೆಗಳ ಸಂಶೋಧನೆಗೆ ಹಣಕಾಸು ಒದಗಿಸುವುದು, ಸಾಂಸ್ಕೃತಿಕ ಸಂಸ್ಥೆಗಳಿಗೆ ಹಣಕಾಸು ಸಹಾಯ ಮಾಡುವುದು; ಆಧುನಿಕ ರಂಗಭೂಮಿಯ, ಸಾಂಪ್ರದಾಯಿಕ ಪ್ರದರ್ಶನ, ಅಭೌತ (Shadow), ರಂಗಭೂಮಿ, ಸೂತ್ರಗೊಂಬೆ ರಂಗಭೂಮಿ ಮತ್ತು ಇತರೆ ಬೊಂಬೆಯಾಟ ಹಬ್ಬಗಳನ್ನು ಏರ್ಪಡಿಸುವುದು, ಗುರುತಿಸಿಕೊಂಡ ಕಲಾವಿದರಿಗೆ ಬಹುಮಾನ ಮತ್ತು ಶಿಷ್ಯವೇತನ ನೀಡುವುದು; ಧ್ವನಿಮುದ್ರಣಗಳು, ವೀಡಿಯೋಗಳು ಮತ್ತು ಛಾಯಾಚಿತ್ರಗಳನ್ನು ಸಂಗ್ರಹಿಸುವುದು; ಮತ್ತು ಶ್ರವಣ ದೃಶ್ಯ ಪತ್ರಗಾರಗಳನ್ನು ಮತ್ತು ಗ್ರಂಥಾಲಯಗಳನ್ನು ಸಹ ನಿರ್ವಹಿಸುವುದು.

"ನಮ್ಮ ಸಂಪ್ರದಾಯಗಳನ್ನು ಸಾಂಸ್ಥಿಕ ರೂಪ ನೀಡಿ ಸಂರಕ್ಷಿಸುವುದು" ಉದ್ದೇಶ ಯಾವುದದ್ದೆಂದರೆ:

1. ಭಾರತೀಯ ಸಾಂಸ್ಕೃತಿಕ ಸಂಬಂಧಗಳ ಮಂಡಳಿ
2. ರಾಷ್ಟ್ರೀಯ ನಾಟಕ ಶಾಲೆ
3. ಲಲಿತಕಲಾ ಅಕಾಡೆಮಿ
4. ಸಂಗೀತ ನಾಟಕ ಅಕಾಡೆಮಿ

#### Options :

485584134529. 1
485584134530. 2
485584134531. 3
485584134532. 4

Question Number : 319 Question Id : 48558433634 Question Type : MCQ Option Shuffling : No Is Question Mandatory : No Calculator : None Response Time : N.A Think Time : N.A Minimum Instruction Time : 0

Correct Marks : 5 Wrong Marks : 1

#### Question Key Details :

Key	Value
Comprehension	Comp4

Read the following passage and answer the questions given below:

### Sangeet Natak Akademi (SNA)

The SNA was established on 31 May 1952. In his speech at the inauguration on 28 January 1953, Maulana Azad (1888-1958), then Union Minister for Education and later founder of the Indian Council for Cultural Relations (ICCR), said that the aim of the SNA was to 'preserve our traditions by offering them an institutional form'.

The SNA's mission, stated in its Memorandum of Association is:

To promote research in the fields of Indian music, dance and drama and for this purpose to establish a library and a museum; to encourage the exchange of ideas and enrichment of techniques between the different regions in regard to the arts of music, dance and drama; to publish research on Indian performing arts; to revive and preserve folk traditions in different regions; to sponsor and encourage festival, seminars and conferences; to give recognition to individual artists for outstanding achievement; to foster cultural contacts between different regions of the country and with other countries; and to cooperate with similar Akademis, institutions and associations for the furtherance of these objectives

With respect to theatre, the SNA holds workshops for playwrights; funds interstate cultural exchange programmes; funds research in the traditional performing arts; offers financial support to cultural institutions; organizes festivals of modern theatre, traditional performance, shadow theatre, marionette theatre and other forms of puppetry; gives awards and fellowship to distinguished artists; collects audiotapes, videos and photographs; and maintains an audiovisual archive as well as a library.

Which among the following is NOT SNA's mission as stated in its Memorandum of Association?

1. To promote research in the fields of Indian Visual Arts
2. To publish research on Indian Performing Arts
3. To revive and preserve folk traditions in different regions
4. To sponsor and encourage festivals, seminars and conferences

#### Options :

485584134533. 1  
485584134534. 2  
485584134535. 3  
485584134536. 4

**Question Number : 319 Question Id : 48558433634 Question Type : MCQ Option Shuffling : No Is Question Mandatory : No Calculator : None Response Time : N.A Think Time : N.A Minimum Instruction Time : 0**

**Correct Marks : 5 Wrong Marks : 1**

#### Question Key Details :

Key	Value
Comprehension	Comp4

ಕೆಳಗಿನ ವಾಕ್ಯಪುಂಜವನ್ನು ಓದಿ ಮತ್ತು ಕೆಳಗಿನ ಪ್ರಶ್ನೆಗಳನ್ನು ಉತ್ತರಿಸಿ:

### ಸಂಗೀತ ನಾಟಕ ಅಕಾಡೆಮಿ (SNA)

SNA ಯನ್ನು 1952ರ ಮೇ 31ರಂದು ಸ್ಥಾಪಿಸಲಾಯಿತು. 1953ರ ಜನವರಿ 28ರಂದು ಇದರ ಉದ್ಘಾಟನೆಯಲ್ಲಿ ಕೇಂದ್ರ ಸಂಪುಟದ ಶಿಕ್ಷಣ ಸಚಿವರು ಮತ್ತು ನಂತರದಲ್ಲಿ ಭಾರತೀಯ ಸಾಂಸ್ಕೃತಿಕ ಸಂಬಂಧಗಳ ಮಂಡಳಿಯ (ICCR) ಸಂಸ್ಥಾಪಕರಾದ ಮೌಲಾನಾ ಆಜಾದ (1898-1958) ರವರು ತಮ್ಮ ನುಡಿಯಲ್ಲಿ SNA ಯ ಗುರಿಯು “ನಮ್ಮ ಸಂಪ್ರದಾಯಗಳನ್ನು ಸಾಂಸ್ಥಿಕ ರೂಪದಲ್ಲಿ ಪರಿಗಣಿಸಿ ಸಂರಕ್ಷಿಸಬೇಕು” ಎಂದು ಹೇಳಿದರು.

SNA ಯ ಧ್ಯೇಯವನ್ನು ತಮ್ಮ ಸಂಘಟನೆಯ ಜ್ಞಾಪಕ ಪತ್ರದಲ್ಲಿ ಹೇಳಲಾಗಿರುವುದು:

ಭಾರತೀಯ ಸಂಗೀತ, ನೃತ್ಯ ಮತ್ತು ನಾಟಕ ಕ್ಷೇತ್ರಗಳಲ್ಲಿ ಸಂಶೋಧನೆಯನ್ನು ಉತ್ತೇಜಿಸಲು ಮತ್ತು ಈ ಉದ್ದೇಶಕ್ಕೆ ಒಂದು ಗ್ರಂಥಾಲಯ ಮತ್ತು ಮ್ಯೂಸಿಯಂಗಳನ್ನು ಸ್ಥಾಪಿಸಬೇಕು; ಸಲಹೆಗಳ ವಿನಿಮಯವನ್ನು ಉತ್ತೇಜಿಸಲು ಮತ್ತು ಸಂಗೀತ, ಕಲೆ, ನೃತ್ಯ ಮತ್ತು ನಾಟಕಗಳ ವಿವಿಧ ಕ್ಷೇತ್ರಗಳ ನಡುವಿನ ತಾಂತ್ರಿಕತೆಯನ್ನು ಶ್ರೀಮಂತಪಡಿಸಲು; ಭಾರತೀಯ ಕಲೆಗಳ ಮೇಲೆ ಸಂಶೋಧನೆಯನ್ನು ಪ್ರಕಟಿಸಲು; ವಿವಿಧ ಪ್ರದೇಶಗಳಲ್ಲಿನ ಜಾನಪದ ಸಂಪ್ರದಾಯಗಳನ್ನು ಪುನರುಜ್ಜೀವನಗೊಳಿಸುವುದು ಮತ್ತು ಸಂರಕ್ಷಿಸುವುದು; ಹಬ್ಬಗಳು, ಸಭೆ ಮತ್ತು ಸಮ್ಮೇಳನಗಳನ್ನು ಪ್ರಾಯೋಜಿಸಿ ಮತ್ತು ಉತ್ತೇಜಿಸುವುದು; ಪ್ರತಿಯೊಬ್ಬ ಕಲಾವಿದರಿಗೂ ಅವರ ಅಪ್ರತಿಮ ಸಾಧನೆಗಳಿಗೆ ಮಾನ್ಯತೆ ನೀಡುವುದು; ದೇಶದ ವಿವಿಧ ಪ್ರದೇಶಗಳ ನಡುವಿನ ಸಾಂಸ್ಕೃತಿಕ ಸಂಪರ್ಕಗಳನ್ನು ಇತರ ದೇಶಗಳೊಂದಿಗೆ ಬೆಳೆಸುವುದು; ಮತ್ತು ಉದ್ದೇಶಗಳ ಮುಂದುವರಿಕೆಗಾಗಿ ಸಮನಾದ ಅಕಾಡೆಮಿಗಳು, ಸಂಸ್ಥೆಗಳು ಮತ್ತು ಸಂಘಟನೆಗಳೊಂದಿಗೆ ಸಹಕರಿಸುವುದು.

ರಂಗಭೂಮಿಗೆ ಸಂಬಂಧಿಸಿದಂತೆ SNA ನಾಟಕ ರಚನೆಗಾರರಿಗೆ ಕಾರ್ಯಾಗಾರಗಳನ್ನು ಏರ್ಪಡಿಸುವುದು; ಅಂತರರಾಜ್ಯ ಸಾಂಸ್ಕೃತಿಕ ವಿನಿಮಯ ಕಾರ್ಯಕ್ರಮಗಳಿಗೆ ಹಣಕಾಸು ಒದಗಿಸುವುದು; ಸಾಂಪ್ರದಾಯಿಕ ಪ್ರದರ್ಶನ ಕಲೆಗಳ ಸಂಶೋಧನೆಗೆ ಹಣಕಾಸು ಒದಗಿಸುವುದು, ಸಾಂಸ್ಕೃತಿಕ ಸಂಸ್ಥೆಗಳಿಗೆ ಹಣಕಾಸು ಸಹಾಯ ಮಾಡುವುದು; ಆಧುನಿಕ ರಂಗಭೂಮಿಯ, ಸಾಂಪ್ರದಾಯಿಕ ಪ್ರದರ್ಶನ, ಅಭೌತ (Shadow), ರಂಗಭೂಮಿ, ಸೂತ್ರಗೊಂಬೆ ರಂಗಭೂಮಿ ಮತ್ತು ಇತರೆ ಬೊಂಬೆಯಾಟ ಹಬ್ಬಗಳನ್ನು ಏರ್ಪಡಿಸುವುದು, ಗುರುತಿಸಿಕೊಂಡ ಕಲಾವಿದರಿಗೆ ಬಹುಮಾನ ಮತ್ತು ಶಿಷ್ಯವೇತನ ನೀಡುವುದು; ಧ್ವನಿಮುದ್ರಣಗಳು, ವೀಡಿಯೋಗಳು ಮತ್ತು ಛಾಯಾಚಿತ್ರಗಳನ್ನು ಸಂಗ್ರಹಿಸುವುದು; ಮತ್ತು ಶ್ರವಣ ದೃಶ್ಯ ಪತ್ರಗಾರಗಳನ್ನು ಮತ್ತು ಗ್ರಂಥಾಲಯಗಳನ್ನು ಸಹ ನಿರ್ವಹಿಸುವುದು.

ಕೆಳಗಿನವುಗಳಲ್ಲಿ ಯಾವುದು ಸಂಘಟನೆಯ ಜ್ಞಾಪಕಪತ್ರದಲ್ಲಿ ಹೇಳಿರುವಂತೆ SNA ಯ ಧ್ಯೇಯವಲ್ಲ?

1. ಭಾರತೀಯ ದೃಶ್ಯ ಕಲೆಗಳ ಕ್ಷೇತ್ರವನ್ನು ಉತ್ತೇಜಿಸುವುದು
2. ಭಾರತೀಯ ಪ್ರದರ್ಶನ ಕಲೆಗಳ ಸಂಶೋಧನೆಯನ್ನು ಪ್ರಕಟಿಸುವುದು
3. ವಿವಿಧ ಪ್ರದೇಶಗಳಲ್ಲಿನ ಜಾನಪದ ಸಂಪ್ರದಾಯಗಳನ್ನು ಪುನರುಜ್ಜೀವನಗೊಳಿಸುವುದು ಮತ್ತು ಸಂರಕ್ಷಿಸುವುದು
4. ಹಬ್ಬಗಳನ್ನು, ಸಭೆ ಮತ್ತು ಸಮ್ಮೇಳನಗಳನ್ನು ಪ್ರಾಯೋಜಿಸುವುದು ಮತ್ತು ಪ್ರೋತ್ಸಾಹಿಸುವುದು

#### Options :

485584134533. 1  
485584134534. 2  
485584134535. 3  
485584134536. 4

Question Number : 320 Question Id : 48558433635 Question Type : MCQ Option Shuffling : No Is Question Mandatory : No Calculator : None Response Time : N.A Think Time : N.A Minimum Instruction Time : 0

Correct Marks : 5 Wrong Marks : 1

#### Question Key Details :

Key	Value
Comprehension	Comp4

Read the following passage and answer the questions given below:

Sangeet Natak Akademi (SNA)

The SNA was established on 31 May 1952. In his speech at the inauguration on 28 January 1953, Maulana Azad (1888-1958), then Union Minister for Education and later founder of the Indian Council for Cultural Relations (ICCR), said that the aim of the SNA was to 'preserve our traditions by offering them an institutional form'.

The SNA's mission, stated in its Memorandum of Association is:

To promote research in the fields of Indian music, dance and drama and for this purpose to establish a library and a museum; to encourage the exchange of ideas and enrichment of techniques between the different regions in regard to the arts of music, dance and drama; to publish research on Indian performing arts; to revive and preserve folk traditions in different regions; to sponsor and encourage festival, seminars and conferences; to give recognition to individual artists for outstanding achievement; to foster cultural contacts between different regions of the country and with other countries; and to cooperate with similar Akademis, institutions and associations for the furtherance of these objectives

With respect to theatre, the SNA holds workshops for playwrights; funds interstate cultural exchange programmes; funds research in the traditional performing arts; offers financial support to cultural institutions; organizes festivals of modern theatre, traditional performance, shadow theatre, marionette theatre and other forms of puppetry; gives awards and fellowship to distinguished artists; collects audiotapes, videos and photographs; and maintains an audiovisual archive as well as a library.

According to the passage, identify the activities conducted by SNA, with respect to theatre.

- A. Funds international cultural exchange programmes
- B. Holds workshops for playwrights
- C. Funds research in the traditional Fine Arts
- D. Offers financial support to cultural institutions
- E. Gives awards and fellowships to distinguished artists

Choose the correct answer from the options given below:

- 1. A, B and D only
- 2. B, D and E only
- 3. B, C and E only
- 4. C, D and E only

**Options :**

- 485584134537. 1
- 485584134538. 2
- 485584134539. 3
- 485584134540. 4

**Question Number : 320 Question Id : 48558433635 Question Type : MCQ Option Shuffling : No Is Question Mandatory : No Calculator : None Response Time : N.A Think Time : N.A Minimum Instruction Time : 0**

**Correct Marks : 5 Wrong Marks : 1**

**Question Key Details :**

Key	Value
-----	-------



ಕೆಳಗಿನ ವಾಕ್ಯಪುಂಜವನ್ನು ಓದಿ ಮತ್ತು ಕೆಳಗಿನ ಪ್ರಶ್ನೆಗಳನ್ನು ಉತ್ತರಿಸಿ:

### ಸಂಗೀತ ನಾಟಕ ಅಕಾಡೆಮಿ (SNA)

SNA ಯನ್ನು 1952ರ ಮೇ 31ರಂದು ಸ್ಥಾಪಿಸಲಾಯಿತು. 1953ರ ಜನವರಿ 28ರಂದು ಇದರ ಉದ್ಘಾಟನೆಯಲ್ಲಿ ಕೇಂದ್ರ ಸಂಪುಟದ ಶಿಕ್ಷಣ ಸಚಿವರು ಮತ್ತು ನಂತರದಲ್ಲಿ ಭಾರತೀಯ ಸಾಂಸ್ಕೃತಿಕ ಸಂಬಂಧಗಳ ಮಂಡಳಿಯ (ICCR) ಸಂಸ್ಥಾಪಕರಾದ ಮೌಲಾನಾ ಆಜಾದ (1898-1958) ರವರು ತಮ್ಮ ನುಡಿಯಲ್ಲಿ SNA ಯ ಗುರಿಯು “ನಮ್ಮ ಸಂಪ್ರದಾಯಗಳನ್ನು ಸಾಂಸ್ಥಿಕ ರೂಪದಲ್ಲಿ ಪರಿಗಣಿಸಿ ಸಂರಕ್ಷಿಸಬೇಕು” ಎಂದು ಹೇಳಿದರು.

SNA ಯ ಧ್ಯೇಯವನ್ನು ತಮ್ಮ ಸಂಘಟನೆಯ ಜ್ಞಾಪಕ ಪತ್ರದಲ್ಲಿ ಹೇಳಲಾಗಿರುವುದು:

ಭಾರತೀಯ ಸಂಗೀತ, ನೃತ್ಯ ಮತ್ತು ನಾಟಕ ಕ್ಷೇತ್ರಗಳಲ್ಲಿ ಸಂಶೋಧನೆಯನ್ನು ಉತ್ತೇಜಿಸಲು ಮತ್ತು ಈ ಉದ್ದೇಶಕ್ಕೆ ಒಂದು ಗ್ರಂಥಾಲಯ ಮತ್ತು ಮ್ಯೂಸಿಯಂಗಳನ್ನು ಸ್ಥಾಪಿಸಬೇಕು; ಸಲಹೆಗಳ ವಿನಿಮಯವನ್ನು ಉತ್ತೇಜಿಸಲು ಮತ್ತು ಸಂಗೀತ, ಕಲೆ, ನೃತ್ಯ ಮತ್ತು ನಾಟಕಗಳ ವಿವಿಧ ಕ್ಷೇತ್ರಗಳ ನಡುವಿನ ತಾಂತ್ರಿಕತೆಯನ್ನು ಶ್ರೀಮಂತಪಡಿಸಲು; ಭಾರತೀಯ ಕಲೆಗಳ ಮೇಲೆ ಸಂಶೋಧನೆಯನ್ನು ಪ್ರಕಟಿಸಲು; ವಿವಿಧ ಪ್ರದೇಶಗಳಲ್ಲಿನ ಜಾನಪದ ಸಂಪ್ರದಾಯಗಳನ್ನು ಪುನರುಜ್ಜೀವನಗೊಳಿಸುವುದು ಮತ್ತು ಸಂರಕ್ಷಿಸುವುದು; ಹಬ್ಬಗಳು, ಸಭೆ ಮತ್ತು ಸಮ್ಮೇಳನಗಳನ್ನು ಪ್ರಾಯೋಜಿಸಿ ಮತ್ತು ಉತ್ತೇಜಿಸುವುದು; ಪ್ರತಿಯೊಬ್ಬ ಕಲಾವಿದರಿಗೂ ಅವರ ಅಪ್ರತಿಮ ಸಾಧನೆಗಳಿಗೆ ಮಾನ್ಯತೆ ನೀಡುವುದು; ದೇಶದ ವಿವಿಧ ಪ್ರದೇಶಗಳ ನಡುವಿನ ಸಾಂಸ್ಕೃತಿಕ ಸಂಪರ್ಕಗಳನ್ನು ಇತರ ದೇಶಗಳೊಂದಿಗೆ ಬೆಳೆಸುವುದು; ಮತ್ತು ಉದ್ದೇಶಗಳ ಮುಂದುವರಿಕೆಗಾಗಿ ಸಮನಾದ ಅಕಾಡೆಮಿಗಳು, ಸಂಸ್ಥೆಗಳು ಮತ್ತು ಸಂಘಟನೆಗಳೊಂದಿಗೆ ಸಹಕರಿಸುವುದು.

ರಂಗಭೂಮಿಗೆ ಸಂಬಂಧಿಸಿದಂತೆ SNA ನಾಟಕ ರಚನೆಗಾರರಿಗೆ ಕಾರ್ಯಾಗಾರಗಳನ್ನು ಏರ್ಪಡಿಸುವುದು; ಅಂತರರಾಜ್ಯ ಸಾಂಸ್ಕೃತಿಕ ವಿನಿಮಯ ಕಾರ್ಯಕ್ರಮಗಳಿಗೆ ಹಣಕಾಸು ಒದಗಿಸುವುದು; ಸಾಂಪ್ರದಾಯಿಕ ಪ್ರದರ್ಶನ ಕಲೆಗಳ ಸಂಶೋಧನೆಗೆ ಹಣಕಾಸು ಒದಗಿಸುವುದು, ಸಾಂಸ್ಕೃತಿಕ ಸಂಸ್ಥೆಗಳಿಗೆ ಹಣಕಾಸು ಸಹಾಯ ಮಾಡುವುದು; ಆಧುನಿಕ ರಂಗಭೂಮಿಯ, ಸಾಂಪ್ರದಾಯಿಕ ಪ್ರದರ್ಶನ, ಅಭೌತ (Shadow), ರಂಗಭೂಮಿ, ಸೂತ್ರಗೊಂಬೆ ರಂಗಭೂಮಿ ಮತ್ತು ಇತರ ಬೊಂಬೆಯಾಟ ಹಬ್ಬಗಳನ್ನು ಏರ್ಪಡಿಸುವುದು, ಗುರುತಿಸಿಕೊಂಡ ಕಲಾವಿದರಿಗೆ ಬಹುಮಾನ ಮತ್ತು ಶಿಷ್ಯವೇತನ ನೀಡುವುದು; ಧ್ವನಿಮುದ್ರಣಗಳು, ವೀಡಿಯೋಗಳು ಮತ್ತು ಛಾಯಾಚಿತ್ರಗಳನ್ನು ಸಂಗ್ರಹಿಸುವುದು; ಮತ್ತು ಶ್ರವಣ ದೃಶ್ಯ ಪತ್ರಗಾರಗಳನ್ನು ಮತ್ತು ಗ್ರಂಥಾಲಯಗಳನ್ನು ಸಹ ನಿರ್ವಹಿಸುವುದು.

ವಾಕ್ಯಪುಂಜದ ಪ್ರಕಾರ, ರಂಗಭೂಮಿಗೆ ಸಂಬಂಧಿಸಿದಂತೆ SNA ನಡೆಸುವ ಚಟುವಟಿಕೆಗಳನ್ನು ಗುರುತಿಸಿ.

- ಅಂತರರಾಷ್ಟ್ರೀಯ ಸಾಂಸ್ಕೃತಿಕ ವಿನಿಮಯ ಕಾರ್ಯಕ್ರಮಗಳಿಗೆ ಹಣಕಾಸು ಒದಗಿಸುವುದು.
- ನಾಟಕ ರಚನೆಗಾರರಿಗೆ ಕಾರ್ಯಾಗಾರಗಳನ್ನು ಏರ್ಪಡಿಸುವುದು.
- ಸಾಂಪ್ರದಾಯಿಕ ಚಿತ್ರಕಲೆಗಳ ಸಂಶೋಧನೆಗೆ ಹಣಕಾಸು ನೀಡುವುದು.
- ಸಾಂಸ್ಕೃತಿಕ ಸಂಸ್ಥೆಗಳಿಗೆ ಹಣಕಾಸು ಸಹಾಯ ನೀಡುವುದು.
- ಗುರುತಿಸಿದ ಕಲಾವಿದರಿಗೆ ಬಹುಮಾನ ಮತ್ತು ಶಿಷ್ಯವೇತನ ನೀಡುವುದು.

ಕೆಳಗೆ ನೀಡಿರುವ ಆಯ್ಕೆಗಳಿಂದ ಸರಿಯಾದ ಉತ್ತರವನ್ನು ಆರಿಸಿ:

1. A, B ಮತ್ತು D ಮಾತ್ರ
2. B, D ಮತ್ತು E ಮಾತ್ರ
3. B, C ಮತ್ತು E ಮಾತ್ರ
4. C, D ಮತ್ತು E ಮಾತ್ರ

### Options :

485584134537. 1
485584134538. 2
485584134539. 3
485584134540. 4

## Music

Section Id :	485584863
Section Number :	2
Section type :	Online
Mandatory or Optional :	Optional
Number of Questions :	25
Number of Questions to be attempted :	20
Section Marks :	100
Enable Mark as Answered Mark for Review and Clear Response :	Yes
Maximum Instruction Time :	0
Sub-Section Number :	1
Sub-Section Id :	4855842438
Question Shuffling Allowed :	Yes
Is Section Default? :	null

Question Number : 321 Question Id : 48558433636 Question Type : MCQ Option Shuffling : No Is Question Mandatory : No Calculator : None Response Time : N.A Think Time : N.A Minimum Instruction Time : 0

Correct Marks : 5 Wrong Marks : 1

Question Key Details :

Key	Value
Comprehension	MCQ1

Writer of our National Anthem -

1. Bankim Chandra Chatterjee
2. Mohammad Iqbal
3. Rabindranath Tagore
4. V. N. Bhatkhande

Options :

- 485584134541. 1
- 485584134542. 2
- 485584134543. 3
- 485584134544. 4

Question Number : 321 Question Id : 48558433636 Question Type : MCQ Option Shuffling : No Is Question Mandatory : No Calculator : None Response Time : N.A Think Time : N.A Minimum Instruction Time : 0

Correct Marks : 5 Wrong Marks : 1

Question Key Details :

Key	Value
Comprehension	MCQ1

ನಮ್ಮ ರಾಷ್ಟ್ರಗೀತೆ ಬರೆದವರು:

1. ಬಂಕಿಂ ಚಂದ್ರ ಚಟರ್ಜಿ
2. ಮೊಹಮ್ಮದ್ ಇಕ್ಬಾಲ್
3. ರವೀಂದ್ರನಾಥ್ ಟ್ಯಾಗೋರ್
4. ವಿ.ಎನ್. ಭಾಟ್ಟಂಡೆ

**Options :**

485584134541. 1  
485584134542. 2  
485584134543. 3  
485584134544. 4

**Question Number : 322 Question Id : 48558433637 Question Type : MCQ Option Shuffling : No Is Question Mandatory : No Calculator : None Response Time : N.A Think Time : N.A Minimum Instruction Time : 0**

**Correct Marks : 5 Wrong Marks : 1**

**Question Key Details :**

Key	Value
Comprehension	MCQ1

While singing Raga Malkauns, the first string of the Tanpura is tuned in:

1. Nishad
2. Madhyam
3. Shadaj
4. Pancham

**Options :**

485584134545. 1  
485584134546. 2  
485584134547. 3  
485584134548. 4

**Question Number : 322 Question Id : 48558433637 Question Type : MCQ Option Shuffling : No Is Question Mandatory : No Calculator : None Response Time : N.A Think Time : N.A Minimum Instruction Time : 0**

**Correct Marks : 5 Wrong Marks : 1**

**Question Key Details :**

Key	Value
Comprehension	MCQ1

ರಾಗ ಮಾಲ್ಕೋನ್ಸ್ ಅನ್ನು ಹಾಡುವಾಗ ತಾನಪುರದ ಮೊದಲ ಎಳೆಯನ್ನು ಸಂಯೋಜಿಸಿದ್ದು ಇದರಲ್ಲಿ:

1. ನಿಷಾದ್
2. ಮಧ್ಯಮ್
3. ಷಾಡಜ್
4. ಪಂಚಮ್

**Options :**

485584134545. 1  
485584134546. 2  
485584134547. 3  
485584134548. 4

**Question Number : 323 Question Id : 48558433638 Question Type : MCQ Option Shuffling : No Is Question Mandatory : No Calculator : None Response Time : N.A Think Time : N.A Minimum Instruction Time : 0**

**Correct Marks : 5 Wrong Marks : 1**

**Question Key Details :**

Key	Value
Comprehension	MCQ1

Kramik Pustak Malika is written by

1. Pt. V. D. Paluskar
2. Pt. Omkar Nath Thakur
3. Ravindranath Tagore
4. Pt. V. N. Bhatkhande

**Options :**

485584134549. 1  
485584134550. 2  
485584134551. 3  
485584134552. 4

**Question Number : 323 Question Id : 48558433638 Question Type : MCQ Option Shuffling : No Is Question Mandatory : No Calculator : None Response Time : N.A Think Time : N.A Minimum Instruction Time : 0**

**Correct Marks : 5 Wrong Marks : 1**

**Question Key Details :**

Key	Value
Comprehension	MCQ1

ಕ್ರಮಿಕ ಪುಸ್ತಕ ಮಾಲಿಕೆಯು ಬರೆಯಲ್ಪಟ್ಟಿದ್ದು ಇವರಿಂದ:

1. ಪಂ. ವಿ.ಡಿ. ಪಲೂಸ್ಕರ್
2. ಪಂ. ಓಂಕಾರನಾಥ ಧಾಕೂರ್
3. ರವೀಂದ್ರನಾಥ ಟ್ಯಾಗೋರ್
4. ಪಂ. ವಿ.ಎನ್. ಭಾಟ್ಟಂಡೆ

**Options :**

485584134549. 1  
485584134550. 2  
485584134551. 3  
485584134552. 4

**Question Number : 324 Question Id : 48558433639 Question Type : MCQ Option Shuffling : No Is Question Mandatory : No Calculator : None Response Time : N.A Think Time : N.A Minimum Instruction Time : 0**

**Correct Marks : 5 Wrong Marks : 1**

**Question Key Details :**

Key	Value
Comprehension	MCQ1

Shadav - Audav Jati has:

1. 6 Swaras in Aroha and 7 Swaras in Avaroha
2. 6 Swaras in Aroha and 5 Swaras in Avaroha
3. 6 Swaras in Aroha and 6 Swaras in Avaroha
4. 5 Swaras in Aroha and 6 Swaras in Avaroha

**Options :**

485584134553. 1  
485584134554. 2  
485584134555. 3  
485584134556. 4

**Question Number : 324 Question Id : 48558433639 Question Type : MCQ Option Shuffling : No Is Question Mandatory : No Calculator : None Response Time : N.A Think Time : N.A Minimum Instruction Time : 0**

**Correct Marks : 5 Wrong Marks : 1**

**Question Key Details :**

Key	Value
Comprehension	MCQ1

ಶಾದವ್-ಔದವ್ ಜಟಿಯು ಹೊಂದಿರುವುದು:

1. ಆರೋಹದಲ್ಲಿ 6 ಸ್ವರಗಳು ಮತ್ತು ಅವರೋಹದಲ್ಲಿ 7 ಸ್ವರಗಳು
2. ಆರೋಹದಲ್ಲಿ 6 ಸ್ವರಗಳು ಮತ್ತು ಅವರೋಹದಲ್ಲಿ 5 ಸ್ವರಗಳು
3. ಆರೋಹದಲ್ಲಿ 6 ಸ್ವರಗಳು ಮತ್ತು ಅವರೋಹದಲ್ಲಿ 6 ಸ್ವರಗಳು
4. ಆರೋಹದಲ್ಲಿ 5 ಸ್ವರಗಳು ಮತ್ತು ಅವರೋಹದಲ್ಲಿ 6 ಸ್ವರಗಳು

**Options :**

485584134553. 1
485584134554. 2
485584134555. 3
485584134556. 4

**Question Number : 325 Question Id : 48558433640 Question Type : MCQ Option Shuffling : No Is Question Mandatory : No Calculator : None Response Time : N.A Think Time : N.A Minimum Instruction Time : 0**

**Correct Marks : 5 Wrong Marks : 1**

**Question Key Details :**

Key	Value
Comprehension	MCQ1

It is also called 'Sparsh' Swara :

1. Alankar
2. Vadi
3. Kan
4. Khatka

**Options :**

485584134557. 1
485584134558. 2
485584134559. 3
485584134560. 4

**Question Number : 325 Question Id : 48558433640 Question Type : MCQ Option Shuffling : No Is Question Mandatory : No Calculator : None Response Time : N.A Think Time : N.A Minimum Instruction Time : 0**

**Correct Marks : 5 Wrong Marks : 1**

**Question Key Details :**

Key	Value
Comprehension	MCQ1

ಇದನ್ನು ಸ್ಪರ್ಶ ಸ್ವರವೆಂತಲೂ ಕರೆಯುತ್ತಾರೆ:

1. ಅಲಂಕಾರ
2. ವಾಡಿ
3. ಕಣ
4. ಖಟ್ಟು

**Options :**

485584134557. 1  
485584134558. 2  
485584134559. 3  
485584134560. 4

**Question Number : 326 Question Id : 48558433641 Question Type : MCQ Option Shuffling : No Is Question Mandatory : No Calculator : None Response Time : N.A Think Time : N.A Minimum Instruction Time : 0**

**Correct Marks : 5 Wrong Marks : 1**

**Question Key Details :**

Key	Value
Comprehension	MCQ1

The first beat (Matra) of the Tala is called:

1. Khali
2. Avartan
3. Tali
4. Sam

**Options :**

485584134561. 1  
485584134562. 2  
485584134563. 3  
485584134564. 4

**Question Number : 326 Question Id : 48558433641 Question Type : MCQ Option Shuffling : No Is Question Mandatory : No Calculator : None Response Time : N.A Think Time : N.A Minimum Instruction Time : 0**

**Correct Marks : 5 Wrong Marks : 1**

**Question Key Details :**

Key	Value
Comprehension	MCQ1

ತಾಳದಲ್ಲಿನ ಮೊದಲ ಲಯ (ಮಾತ್ರೆ)ಯನ್ನು ಏನೆಂದು ಕರೆಯುತ್ತಾರೆಂದರೆ:

1. ಖಾಲಿ
2. ಆವರ್ತನ
3. ತಾಳಿ
4. ಸಾಮ್

**Options :**

485584134561. 1  
485584134562. 2  
485584134563. 3  
485584134564. 4

**Question Number : 327 Question Id : 48558433642 Question Type : MCQ Option Shuffling : No Is Question Mandatory : No Calculator : None Response Time : N.A Think Time : N.A Minimum Instruction Time : 0**

**Correct Marks : 5 Wrong Marks : 1**

**Question Key Details :**

Key	Value
Comprehension	MCQ1

A set of notes to identify a Raga is called:

1. Aroha
2. Avaroha
3. Alap
4. Pakad

**Options :**

485584134565. 1  
485584134566. 2  
485584134567. 3  
485584134568. 4

**Question Number : 327 Question Id : 48558433642 Question Type : MCQ Option Shuffling : No Is Question Mandatory : No Calculator : None Response Time : N.A Think Time : N.A Minimum Instruction Time : 0**

**Correct Marks : 5 Wrong Marks : 1**

**Question Key Details :**

Key	Value
Comprehension	MCQ1



ಒಂದು ರಾಗವನ್ನು ಗುರುತಿಸುವ ಒಂದು ಶ್ರುತಿಗಳ ಜೋಡಿಯನ್ನು ಏನೆಂದು ಕರೆಯುತ್ತಾರೆಂದರೆ:

1. ಆರೋಹ
2. ಅವರೋಹ
3. ಅಲಾಪ
4. ಪಕಡ್

**Options :**

485584134565. 1  
485584134566. 2  
485584134567. 3  
485584134568. 4

**Question Number : 328 Question Id : 48558433643 Question Type : MCQ Option Shuffling : No Is Question Mandatory : No Calculator : None Response Time : N.A Think Time : N.A Minimum Instruction Time : 0**

**Correct Marks : 5 Wrong Marks : 1**

**Question Key Details :**

Key	Value
Comprehension	MCQ1

Elaboration of notes of a Raga in slow tempo is known as:

1. Gram
2. Murchhana
3. Tana
4. Alap

**Options :**

485584134569. 1  
485584134570. 2  
485584134571. 3  
485584134572. 4

**Question Number : 328 Question Id : 48558433643 Question Type : MCQ Option Shuffling : No Is Question Mandatory : No Calculator : None Response Time : N.A Think Time : N.A Minimum Instruction Time : 0**

**Correct Marks : 5 Wrong Marks : 1**

**Question Key Details :**

Key	Value
Comprehension	MCQ1

ಒಂದು ರಾಗದ ಶ್ರುತಿಯನ್ನು ನಿಧಾನ ತಾಳದಲ್ಲಿ ವಿವರಿಸುವುದನ್ನು ಏನೆಂದು ತಿಳಿಯಲಾಗಿದೆ ಎಂದರೆ:

1. ಗ್ರಾಮ
2. ಮೂರ್ಛನ
3. ತಾನ
4. ಅಲಾಪ

**Options :**

485584134569. 1  
485584134570. 2  
485584134571. 3  
485584134572. 4

**Question Number : 329 Question Id : 48558433644 Question Type : MCQ Option Shuffling : No Is Question Mandatory : No Calculator : None Response Time : N.A Think Time : N.A Minimum Instruction Time : 0**

**Correct Marks : 5 Wrong Marks : 1**

**Question Key Details :**

Key	Value
Comprehension	MCQ1

Mushtaq Ali Khan belonged to:

1. Jaipur Gharana
2. Senia Gharana
3. Kirana Gharana
4. Agra Gharana

**Options :**

485584134573. 1  
485584134574. 2  
485584134575. 3  
485584134576. 4

**Question Number : 329 Question Id : 48558433644 Question Type : MCQ Option Shuffling : No Is Question Mandatory : No Calculator : None Response Time : N.A Think Time : N.A Minimum Instruction Time : 0**

**Correct Marks : 5 Wrong Marks : 1**

**Question Key Details :**

Key	Value
Comprehension	MCQ1

ಮುಷ್ಠಾಕ್ ಆಲಿ ಖಾನ್ ಸೇರಿರುವುದು:

1. ಜೈಪುರ ಘರಾನಾಕ್ಕೆ
2. ಸೇನಿಯಾ ಘರಾನಾಕ್ಕೆ
3. ಕಿರಾನಾ ಘರಾನಾಕ್ಕೆ
4. ಆಗ್ರಾ ಘರಾನಾಕ್ಕೆ

**Options :**

485584134573. 1  
485584134574. 2  
485584134575. 3  
485584134576. 4

**Question Number : 330 Question Id : 48558433645 Question Type : MCQ Option Shuffling : No Is Question Mandatory : No Calculator : None Response Time : N.A Think Time : N.A Minimum Instruction Time : 0**

**Correct Marks : 5 Wrong Marks : 1**

**Question Key Details :**

Key	Value
Comprehension	MCQ1

Tala played with Maseetkhani Gat is:

1. Ektala
2. Teentala
3. Sooltala
4. Keharwa

**Options :**

485584134577. 1  
485584134578. 2  
485584134579. 3  
485584134580. 4

**Question Number : 330 Question Id : 48558433645 Question Type : MCQ Option Shuffling : No Is Question Mandatory : No Calculator : None Response Time : N.A Think Time : N.A Minimum Instruction Time : 0**

**Correct Marks : 5 Wrong Marks : 1**

**Question Key Details :**

Key	Value
Comprehension	MCQ1

ಮಸೀತ್ಯಾನಿ ಘಟದ ಜೊತೆಗೆ ತಾಳ ನುಡಿಸುವುದು:

1. ಏಕತಾಳ
2. ತೀನ್ತಾಳ
3. ಸೂಲತಾಳ
4. ಕೆಹರ್ವ

**Options :**

485584134577. 1  
485584134578. 2  
485584134579. 3  
485584134580. 4

**Question Number : 331 Question Id : 48558433646 Question Type : MCQ Option Shuffling : No Is Question Mandatory : No Calculator : None Response Time : N.A Think Time : N.A Minimum Instruction Time : 0**

**Correct Marks : 5 Wrong Marks : 1**

**Question Key Details :**

Key	Value
Comprehension	MCQ1

The first half of the Saptak is called:

1. Uttarang
2. Purvang
3. Aroha
4. Avaroha

**Options :**

485584134581. 1  
485584134582. 2  
485584134583. 3  
485584134584. 4

**Question Number : 331 Question Id : 48558433646 Question Type : MCQ Option Shuffling : No Is Question Mandatory : No Calculator : None Response Time : N.A Think Time : N.A Minimum Instruction Time : 0**

**Correct Marks : 5 Wrong Marks : 1**

**Question Key Details :**

Key	Value
Comprehension	MCQ1

ಸಪ್ತಕದ ಮೊದಲಾರ್ಧವನ್ನು ಏನೆಂದು ಕರೆಯುತ್ತಾರೆಂದರೆ:

1. ಉತ್ತರಾಂಗ್
2. ಪೂರ್ವಾಂಗ್
3. ಆರೋಹ
4. ಅವರೋಹ

**Options :**

485584134581. 1  
485584134582. 2  
485584134583. 3  
485584134584. 4

**Question Number : 332 Question Id : 48558433647 Question Type : MCQ Option Shuffling : No Is Question Mandatory : No Calculator : None Response Time : N.A Think Time : N.A Minimum Instruction Time : 0**

**Correct Marks : 5 Wrong Marks : 1**

**Question Key Details :**

Key	Value
Comprehension	MCQ1

Mention the tala with anga's Drutam + Laghu

1. Adi tala
2. Roopaka tala
3. Chapu tala
4. Tripata tala

**Options :**

485584134585. 1  
485584134586. 2  
485584134587. 3  
485584134588. 4

**Question Number : 332 Question Id : 48558433647 Question Type : MCQ Option Shuffling : No Is Question Mandatory : No Calculator : None Response Time : N.A Think Time : N.A Minimum Instruction Time : 0**

**Correct Marks : 5 Wrong Marks : 1**

**Question Key Details :**

Key	Value
Comprehension	MCQ1

ಧೃತಂ + ಲಘುವಿನ ಅಂಗಗಳ ಜೊತೆಗಿರುವ ತಾಳವನ್ನು ತಿಳಿಸಿ:

1. ಆದಿತಾಳ
2. ರೂಪಕ ತಾಳ
3. ಚಾಪು ತಾಳ
4. ತ್ರಿಪುಟ ತಾಳ

**Options :**

485584134585. 1  
485584134586. 2  
485584134587. 3  
485584134588. 4

**Question Number : 333 Question Id : 48558433648 Question Type : MCQ Option Shuffling : No Is Question Mandatory : No Calculator : None Response Time : N.A Think Time : N.A Minimum Instruction Time : 0**

**Correct Marks : 5 Wrong Marks : 1**

**Question Key Details :**

Key	Value
Comprehension	MCQ1

Laya of Musical composition in fast tempo is known as:

1. Sama laya
2. Drut laya
3. Vilambit laya
4. Madhya laya

**Options :**

485584134589. 1  
485584134590. 2  
485584134591. 3  
485584134592. 4

**Question Number : 333 Question Id : 48558433648 Question Type : MCQ Option Shuffling : No Is Question Mandatory : No Calculator : None Response Time : N.A Think Time : N.A Minimum Instruction Time : 0**

**Correct Marks : 5 Wrong Marks : 1**

**Question Key Details :**

Key	Value
Comprehension	MCQ1

ವೇಗದ ತಾಳದಲ್ಲಿನ ಸಂಗೀತ ಸಂಯೋಜನೆಯ ಲಯವನ್ನು ಏನೆಂದು ತಿಳಿಯಲಾಗಿದೆ ಎಂದರೆ:

1. ಸಮ ಲಯ
2. ದೃತ ಲಯ
3. ವಿಳಂಬಿತ ಲಯ
4. ಮಧ್ಯ ಲಯ

**Options :**

485584134589. 1  
485584134590. 2  
485584134591. 3  
485584134592. 4

**Question Number : 334 Question Id : 48558433649 Question Type : MCQ Option Shuffling : No Is Question Mandatory : No Calculator : None Response Time : N.A Think Time : N.A Minimum Instruction Time : 0**

**Correct Marks : 5 Wrong Marks : 1**

**Question Key Details :**

Key	Value
Comprehension	MCQ1

What is the original name of Purandaradas?

1. Venkatesa
2. Shreenivasa
3. Sreedhara
4. Vasudeva

**Options :**

485584134593. 1  
485584134594. 2  
485584134595. 3  
485584134596. 4

**Question Number : 334 Question Id : 48558433649 Question Type : MCQ Option Shuffling : No Is Question Mandatory : No Calculator : None Response Time : N.A Think Time : N.A Minimum Instruction Time : 0**

**Correct Marks : 5 Wrong Marks : 1**

**Question Key Details :**

Key	Value
Comprehension	MCQ1

ಪುರಂದರ ದಾಸರ ಮೂಲ ನಾಮವೇನು?

1. ವೆಂಕಟೇಶ
2. ಶ್ರೀನಿವಾಸ
3. ಶ್ರೀಧರ
4. ವಾಸುದೇವ

**Options :**

485584134593. 1  
485584134594. 2  
485584134595. 3  
485584134596. 4

**Question Number : 335 Question Id : 48558433650 Question Type : MCQ Option Shuffling : No Is Question Mandatory : No Calculator : None Response Time : N.A Think Time : N.A Minimum Instruction Time : 0**

**Correct Marks : 5 Wrong Marks : 1**

**Question Key Details :**

Key	Value
Comprehension	MCQ1

Select the tala which has 7 Aksharakalas/Matra

1. Roopakam / Dadra
2. Adi Tala / Teental
3. Chaputala / Roopak
4. Jhampa Tala / Jhaptal

**Options :**

485584134597. 1  
485584134598. 2  
485584134599. 3  
485584134600. 4

**Question Number : 335 Question Id : 48558433650 Question Type : MCQ Option Shuffling : No Is Question Mandatory : No Calculator : None Response Time : N.A Think Time : N.A Minimum Instruction Time : 0**

**Correct Marks : 5 Wrong Marks : 1**

**Question Key Details :**

Key	Value
Comprehension	MCQ1



7 ಅಕ್ಷರ ಕಲೆಗಳು/ಮಾತ್ರೆಗಳನ್ನು ಹೊಂದಿರುವ ತಾಳವನ್ನು ಆಯ್ಕೆ ಮಾಡಿ:

1. ರೂಪಕಂ/ದಾದ್ರ
2. ಆದಿ/ತೀನ್‌ತಾಳ
3. ಚಾಪುತಾಳ/ರೂಪಕ
4. ಝಂಪ ತಾಳ/ಝಪ್ ತಾಳ

**Options :**

485584134597. 1  
485584134598. 2  
485584134599. 3  
485584134600. 4

**Question Number : 336 Question Id : 48558433651 Question Type : MCQ Option Shuffling : No Is Question Mandatory : No Calculator : None Response Time : N.A Think Time : N.A Minimum Instruction Time : 0**

**Correct Marks : 5 Wrong Marks : 1**

**Question Key Details :**

Key	Value
Comprehension	MCQ1

Select the Audava raga from the following:

1. Shankarabharanam
2. Kalyani
3. Sri Ranjani
4. Hindolam

**Options :**

485584134601. 1  
485584134602. 2  
485584134603. 3  
485584134604. 4

**Question Number : 336 Question Id : 48558433651 Question Type : MCQ Option Shuffling : No Is Question Mandatory : No Calculator : None Response Time : N.A Think Time : N.A Minimum Instruction Time : 0**

**Correct Marks : 5 Wrong Marks : 1**

**Question Key Details :**

Key	Value
Comprehension	MCQ1

ಕೆಳಗಿನವುಗಳಿಂದ ಔದವ ರಾಗವನ್ನು ಆಯ್ಕೆ ಮಾಡಿ:

1. ಶಂಕರಾಭರಣಂ
2. ಕಲ್ಯಾಣಿ
3. ಶ್ರೀರಂಜನಿ
4. ಹಿಂದೋಳಂ

**Options :**

485584134601. 1  
485584134602. 2  
485584134603. 3  
485584134604. 4

**Question Number : 337 Question Id : 48558433652 Question Type : MCQ Option Shuffling : No Is Question Mandatory :  
No Calculator : None Response Time : N.A Think Time : N.A Minimum Instruction Time : 0**

**Correct Marks : 5 Wrong Marks : 1**

**Question Key Details :**

Key	Value
Comprehension	MCQ1

The sound emanating from the stringed instruments is known as:

1. Shareeraja
2. Lohaja
3. Charmaja
4. Vayuja

**Options :**

485584134605. 1  
485584134606. 2  
485584134607. 3  
485584134608. 4

**Question Number : 337 Question Id : 48558433652 Question Type : MCQ Option Shuffling : No Is Question Mandatory :  
No Calculator : None Response Time : N.A Think Time : N.A Minimum Instruction Time : 0**

**Correct Marks : 5 Wrong Marks : 1**

**Question Key Details :**

Key	Value
Comprehension	MCQ1

ತಂತ್ರಿಯುಕ್ತ ಸಾಧನಗಳಿಂದ ಹೊರಹೊಮ್ಮುವ ಶಬ್ದವನ್ನು ಏನೆಂದು ತಿಳಿಯಲಾಗಿದೆಯೆಂದರೆ:

1. ಶಾರೀರಜ
2. ಲೋಹಜ
3. ಚರ್ಮಜ
4. ವಾಯುಜ

**Options :**

485584134605. 1  
485584134606. 2  
485584134607. 3  
485584134608. 4

**Question Number : 338 Question Id : 48558433653 Question Type : MCQ Option Shuffling : No Is Question Mandatory : No Calculator : None Response Time : N.A Think Time : N.A Minimum Instruction Time : 0**

**Correct Marks : 5 Wrong Marks : 1**

**Question Key Details :**

Key	Value
Comprehension	MCQ1

A musical form which needs high creative ability:

1. Kriti
2. Padam
3. Pallavi
4. Tillana

**Options :**

485584134609. 1  
485584134610. 2  
485584134611. 3  
485584134612. 4

**Question Number : 338 Question Id : 48558433653 Question Type : MCQ Option Shuffling : No Is Question Mandatory : No Calculator : None Response Time : N.A Think Time : N.A Minimum Instruction Time : 0**

**Correct Marks : 5 Wrong Marks : 1**

**Question Key Details :**

Key	Value
Comprehension	MCQ1

ಅಧಿಕ ಸೃಜನಾತ್ಮಕ ಸಾಮರ್ಥ್ಯ ಅಗತ್ಯವಿರುವ ಒಂದು ಸಂಗೀತದ ರೂಪವು:

1. ಕೃತಿ
2. ಪದಮ್
3. ಪಲ್ಲವಿ
4. ತಿಲ್ಲಾನ

**Options :**

485584134609. 1  
485584134610. 2  
485584134611. 3  
485584134612. 4

**Question Number : 339 Question Id : 48558433654 Question Type : MCQ Option Shuffling : No Is Question Mandatory : No Calculator : None Response Time : N.A Think Time : N.A Minimum Instruction Time : 0**

**Correct Marks : 5 Wrong Marks : 1**

**Question Key Details :**

Key	Value
Comprehension	MCQ1

Sa Re Ga Ma Pa Dha Ni swaras belong to:

1. Bhairavi Thata
2. Kafi Thata
3. Asavari Thata
4. Khamaj Thata

**Options :**

485584134613. 1  
485584134614. 2  
485584134615. 3  
485584134616. 4

**Question Number : 339 Question Id : 48558433654 Question Type : MCQ Option Shuffling : No Is Question Mandatory : No Calculator : None Response Time : N.A Think Time : N.A Minimum Instruction Time : 0**

**Correct Marks : 5 Wrong Marks : 1**

**Question Key Details :**

Key	Value
Comprehension	MCQ1

ಸಾ ರೇ ಗಾ ಮ ಪಾ ಧ ನಿ ಸ್ವರಗಳು ಸೇರುವುದು ಇದಕ್ಕೆ:

1. ಭೈರವಿ ಧಾಟ
2. ಕಾಫಿ ಧಾಟ
3. ಅಸಾವರಿ ಧಾಟ
4. ಖಮಜ್ ಧಾಟ

**Options :**

485584134613. 1  
485584134614. 2  
485584134615. 3  
485584134616. 4

**Question Number : 340 Question Id : 48558433655 Question Type : MCQ Option Shuffling : No Is Question Mandatory : No Calculator : None Response Time : N.A Think Time : N.A Minimum Instruction Time : 0**

**Correct Marks : 5 Wrong Marks : 1**

**Question Key Details :**

Key	Value
Comprehension	MCQ1

Select two 'THATA' / MELA from the following:

- A. Kalyan / Kalyani
- B. Malkauns / Hindolam
- C. Bhupali / Mohanam
- D. Bhairav / Mayamalavganla
- E. Bageshree / Sriranjani

Choose the correct answer from the options given below:

1. A and B only
2. B and C only
3. A and D only
4. B and E only

**Options :**

485584134617. 1  
485584134618. 2  
485584134619. 3  
485584134620. 4

**Question Number : 340 Question Id : 48558433655 Question Type : MCQ Option Shuffling : No Is Question Mandatory : No Calculator : None Response Time : N.A Think Time : N.A Minimum Instruction Time : 0**

**Correct Marks : 5 Wrong Marks : 1**

**Question Key Details :**

Key	Value
Comprehension	MCQ1

ಕೆಳಗಿನವುಗಳಿಂದ ಎರಡು 'ಧಾಟಿ'/ಮೇಳಗಳನ್ನು ಆಯ್ಕೆ ಮಾಡಿ:

- A. ಕಲ್ಯಾಣ/ಕಲ್ಯಾಣಿ
- B. ಮಾಲಕೌಂಸ್/ಹಿಂದೋಳಮ್
- C. ಭೂಪಾಲಿ/ ಮೋಹನಮ್
- D. ಭೈರವ್/ಮಾಯಾಮಾಲಾವಗಾನ
- E. ಬಾಗೇಶ್ವೀ/ಶ್ರೀರಂಜನಿ

ಕೆಳಗೆ ನೀಡಿರುವ ಆಯ್ಕೆಗಳಿಂದ ಸರಿಯಾದ ಉತ್ತರವನ್ನು ಆರಿಸಿ:

- 1. A ಮತ್ತು B ಮಾತ್ರ
- 2. B ಮತ್ತು C ಮಾತ್ರ
- 3. A ಮತ್ತು D ಮಾತ್ರ
- 4. B ಮತ್ತು E ಮಾತ್ರ

**Options :**

- 485584134617. 1
- 485584134618. 2
- 485584134619. 3
- 485584134620. 4

**Question Number : 341 Question Id : 48558433656 Question Type : MCQ Option Shuffling : No Is Question Mandatory : No Calculator : None Response Time : N.A Think Time : N.A Minimum Instruction Time : 0**

**Correct Marks : 5 Wrong Marks : 1**

**Question Key Details :**

Key	Value
Comprehension	MCQ1

Three qualities of Nad are:

- A. Swara
- B. Pitch
- C. Intensity
- D. Alankar
- E. Timbre

Choose the correct answer from the options given below:

- 1. A, B and C only
- 2. B, C and E only
- 3. A, D and E only
- 4. B, C and D only

**Options :**

- 485584134621. 1
- 485584134622. 2
- 485584134623. 3
- 485584134624. 4

Question Number : 341 Question Id : 48558433656 Question Type : MCQ Option Shuffling : No Is Question Mandatory :  
No Calculator : None Response Time : N.A Think Time : N.A Minimum Instruction Time : 0  
Correct Marks : 5 Wrong Marks : 1

Question Key Details :

Key	Value
Comprehension	MCQ1

ನಾದದ ಮೂರು ಗುಣಗಳೆಂದರೆ:

- A. ಸ್ವರ
- B. ಶೃತಿ
- C. ತೀವ್ರತೆ
- D. ಅಲಂಕಾರ
- E. ಧ್ವನಿಯ ವಿಶಿಷ್ಟ ಗುಣ

ಕೆಳಗೆ ನೀಡಿರುವ ಆಯ್ಕೆಗಳಿಂದ ಸರಿಯಾದ ಉತ್ತರವನ್ನು ಆರಿಸಿ:

1. A, B ಮತ್ತು C ಮಾತ್ರ
2. B, C ಮತ್ತು E ಮಾತ್ರ
3. A, D ಮತ್ತು E ಮಾತ್ರ
4. B, C ಮತ್ತು D ಮಾತ್ರ

Options :

- 485584134621. 1
- 485584134622. 2
- 485584134623. 3
- 485584134624. 4

Question Number : 342 Question Id : 48558433657 Question Type : MCQ Option Shuffling : No Is Question Mandatory :  
No Calculator : None Response Time : N.A Think Time : N.A Minimum Instruction Time : 0  
Correct Marks : 5 Wrong Marks : 1

Question Key Details :

Key	Value
Comprehension	MCQ1

Match List I with List II

LIST I		LIST II	
A.	Vilambit Khayal	I.	Tillana
B.	Tarana	II.	Kriti
C.	Thumri	III.	Maseetkhani Gat
D.	Khayal	IV.	Padam

Choose the correct answer from the options given below:

1. A-I, B-III, C-II, D-IV
2. A-II, B-I, C-IV, D-III
3. A-III, B-I, C-IV, D-II
4. A-IV, B-II, C-I, D-III

**Options :**

485584134625. 1  
485584134626. 2  
485584134627. 3  
485584134628. 4

**Question Number : 342 Question Id : 48558433657 Question Type : MCQ Option Shuffling : No Is Question Mandatory : No Calculator : None Response Time : N.A Think Time : N.A Minimum Instruction Time : 0**

**Correct Marks : 5 Wrong Marks : 1**

**Question Key Details :**

Key	Value
Comprehension	MCQ1

ಪಟ್ಟಿ - Iನ್ನು ಪಟ್ಟಿ - IIರೊಂದಿಗೆ ಹೊಂದಿಸಿ:

ಪಟ್ಟಿ - I		ಪಟ್ಟಿ - II	
A.	ವಿಳಂಬಿತ ಖಯಾಲ್	I.	ತಿಲ್ಲಾನ
B.	ತರಾನಾ	II.	ಕೃತಿ
C.	ಠುಮ್ರಿ	III.	ಮಸೀತ್ಖಾನಿ ಗಾತ್
D.	ಖಯಾಲ್	IV.	ಪದಂ

ಕೆಳಗೆ ನೀಡಿರುವ ಆಯ್ಕೆಗಳಿಂದ ಸರಿಯಾದ ಉತ್ತರವನ್ನು ಆರಿಸಿ:

1. A-I, B-III, C-II, D-IV
2. A-II, B-I, C-IV, D-III
3. A-III, B-I, C-IV, D-II
4. A-IV, B-II, C-I, D-III

**Options :**

485584134625. 1  
485584134626. 2  
485584134627. 3  
485584134628. 4



**Question Number : 343 Question Id : 48558433658 Question Type : MCQ Option Shuffling : No Is Question Mandatory : No Calculator : None Response Time : N.A Think Time : N.A Minimum Instruction Time : 0**  
**Correct Marks : 5 Wrong Marks : 1**  
**Question Key Details :**

Key	Value
Comprehension	MCQ1

Match List I with List II

LIST I		LIST II	
A.	Nada	I.	Avroha
B.	Shruti	II.	Vivadi
C.	Swara	III.	Pramana
D.	Scale	IV.	Ahata

Choose the correct answer from the options given below:

1. A-I, B-II, C-III, D-IV
2. A-II, B-III, C-IV, D-I
3. A-III, B-IV, C-I, D-II
4. A-IV, B-III, C-II, D-I

**Options :**

- 485584134629. 1
- 485584134630. 2
- 485584134631. 3
- 485584134632. 4

**Question Number : 343 Question Id : 48558433658 Question Type : MCQ Option Shuffling : No Is Question Mandatory : No Calculator : None Response Time : N.A Think Time : N.A Minimum Instruction Time : 0**  
**Correct Marks : 5 Wrong Marks : 1**  
**Question Key Details :**

Key	Value
Comprehension	MCQ1

ಪಟ್ಟಿ - Iನ್ನು ಪಟ್ಟಿ - IIರೊಂದಿಗೆ ಹೊಂದಿಸಿ:

ಪಟ್ಟಿ - I	ಪಟ್ಟಿ - II
A. ನಾದ	I. ಅವರೋಹ
B. ಶ್ರುತಿ	II. ವಿವಾದಿ
C. ಸ್ವರ	III. ಪ್ರಮಾಣ
D. ಸ್ಥೇಲ್	IV. ಅಹತ

ಕೆಳಗೆ ನೀಡಿರುವ ಆಯ್ಕೆಗಳಿಂದ ಸರಿಯಾದ ಉತ್ತರವನ್ನು ಆರಿಸಿ:

1. A-I, B-II, C-III, D-IV
2. A-II, B-III, C-IV, D-I
3. A-III, B-IV, C-I, D-II
4. A-IV, B-III, C-II, D-I

**Options :**

485584134629. 1  
485584134630. 2  
485584134631. 3  
485584134632. 4

**Question Number : 344 Question Id : 48558433659 Question Type : MCQ Option Shuffling : No Is Question Mandatory : No Calculator : None Response Time : N.A Think Time : N.A Minimum Instruction Time : 0**

**Correct Marks : 5 Wrong Marks : 1**

**Question Key Details :**

Key	Value
Comprehension	MCQ1

Arrange the Talas according to their ascending order of Matras:

- A. Ektala
- B. Keharwa
- C. Dadra
- D. Jhaptala
- E. Teentala

Choose the correct answer from the options given below:

1. A, B, C, D, E
2. A, C, B, D, E
3. C, B, D, A, E
4. C, B, A, D, E

**Options :**

485584134633. 1  
485584134634. 2  
485584134635. 3  
485584134636. 4

Question Number : 344 Question Id : 48558433659 Question Type : MCQ Option Shuffling : No Is Question Mandatory :  
No Calculator : None Response Time : N.A Think Time : N.A Minimum Instruction Time : 0  
Correct Marks : 5 Wrong Marks : 1

Question Key Details :

Key	Value
Comprehension	MCQ1

ತಾಳಗಳನ್ನು ಅವುಗಳ ಮಾತೃಗಳ ಏರಿಕೆ ಕ್ರಮದಲ್ಲಿ ಜೋಡಿಸಿ:

- A. ಏಕತಾಳ
- B. ಕೆಹರ್ವ
- C. ದಾದ್ರ
- D. ರುಪ್ ತಾಳ
- E. ತೀನ್ ತಾಳ

ಕೆಳಗೆ ನೀಡಿರುವ ಆಯ್ಕೆಗಳಿಂದ ಸರಿಯಾದ ಉತ್ತರವನ್ನು ಆರಿಸಿ:

- 1. A, B, C, D, E
- 2. A, C, B, D, E
- 3. C, B, D, A, E
- 4. C, B, A, D, E

Options :

- 485584134633. 1
- 485584134634. 2
- 485584134635. 3
- 485584134636. 4

Question Number : 345 Question Id : 48558433660 Question Type : MCQ Option Shuffling : No Is Question Mandatory :  
No Calculator : None Response Time : N.A Think Time : N.A Minimum Instruction Time : 0

Correct Marks : 5 Wrong Marks : 1

Question Key Details :

Key	Value
Comprehension	MCQ1

Arrange the swaras of Raga Bhupali / Mohanam according to its Avaroha:

- A. Pa
- B. Re
- C. Ga
- D. Dha
- E. Sa

Choose the correct answer from the options given below:

1. A, B, C, E, D
2. D, A, C, B, E
3. E, B, C, A, D
4. E, D, A, C, B

**Options :**

- 485584134637. 1
- 485584134638. 2
- 485584134639. 3
- 485584134640. 4

**Question Number : 345 Question Id : 48558433660 Question Type : MCQ Option Shuffling : No Is Question Mandatory : No Calculator : None Response Time : N.A Think Time : N.A Minimum Instruction Time : 0**

**Correct Marks : 5 Wrong Marks : 1**

**Question Key Details :**

Key	Value
Comprehension	MCQ1

ರಾಗ ಭೂಪಾಲಿ/ಮೋಹನಮಾನ ಸ್ವರಗಳನ್ನು ಅವರೋಹದ ಪ್ರಕಾರ ಜೋಡಿಸಿ:

- A. ಪಾ
- B. ರೇ
- C. ಗಾ
- D. ಧಾ
- E. ಸಾ

ಕೆಳಗೆ ನೀಡಿರುವ ಆಯ್ಕೆಗಳಿಂದ ಸರಿಯಾದ ಉತ್ತರವನ್ನು ಆರಿಸಿ:

1. A, B, C, E, D
2. D, A, C, B, E
3. E, B, C, A, D
4. E, D, A, C, B

**Options :**

- 485584134637. 1
- 485584134638. 2
- 485584134639. 3
- 485584134640. 4

## Dance

Section Id :	485584864
Section Number :	3
Section type :	Online
Mandatory or Optional :	Optional
Number of Questions :	25
Number of Questions to be attempted :	20
Section Marks :	100
Enable Mark as Answered Mark for Review and Clear Response :	Yes
Maximum Instruction Time :	0
Sub-Section Number :	1
Sub-Section Id :	4855842439
Question Shuffling Allowed :	Yes
Is Section Default? :	null

Question Number : 346 Question Id : 48558433661 Question Type : MCQ Option Shuffling : No Is Question Mandatory : No Calculator : None Response Time : N.A Think Time : N.A Minimum Instruction Time : 0

Correct Marks : 5 Wrong Marks : 1

Question Key Details :

Key	Value
Comprehension	MCQ2

"Uddipan" and "Aalamban" are the types of -

1. Vibhav
2. Anubhav
3. Aangik
4. Vachik

Options :

485584134641. 1  
485584134642. 2  
485584134643. 3  
485584134644. 4

Question Number : 346 Question Id : 48558433661 Question Type : MCQ Option Shuffling : No Is Question Mandatory : No Calculator : None Response Time : N.A Think Time : N.A Minimum Instruction Time : 0

Correct Marks : 5 Wrong Marks : 1

Question Key Details :

Key	Value
Comprehension	MCQ2

"ಉದ್ದೇಶನ" ಮತ್ತು "ಆಲಂಬಮ"ಗಳು ಯಾವುದರ ವಿಧಗಳೆಂದರೆ:

1. ವಿಭವ್
2. ಅನುಭವ್
3. ಆಂಗಿಕ
4. ವಾಚಿಕ

**Options :**

485584134641. 1  
485584134642. 2  
485584134643. 3  
485584134644. 4

**Question Number : 347 Question Id : 48558433662 Question Type : MCQ Option Shuffling : No Is Question Mandatory : No Calculator : None Response Time : N.A Think Time : N.A Minimum Instruction Time : 0**

**Correct Marks : 5 Wrong Marks : 1**

**Question Key Details :**

Key	Value
Comprehension	MCQ2

What is the make-up artist's process called who applies cutti or chutti on actor-dancer's face in Kathakali?

1. Kattalan
2. Pitham
3. Chuttikaran
4. Talavattam

**Options :**

485584134645. 1  
485584134646. 2  
485584134647. 3  
485584134648. 4

**Question Number : 347 Question Id : 48558433662 Question Type : MCQ Option Shuffling : No Is Question Mandatory : No Calculator : None Response Time : N.A Think Time : N.A Minimum Instruction Time : 0**

**Correct Marks : 5 Wrong Marks : 1**

**Question Key Details :**

Key	Value
Comprehension	MCQ2

ಕಥಕಳಿಯಲ್ಲಿ ಕಲಾವಿದ-ನೃತ್ಯ ಮಾಡುವವರ ಮುಖಕ್ಕೆ ಕುಟ್ಟಿ ಮತ್ತು ಚುಟ್ಟಿ ಹಚ್ಚುವ ವೇಷ ಹಾಕುವ ಕಲಾವಿದರ ಪ್ರಕ್ರಿಯೆಯನ್ನು ಏನೆಂದು ಕರೆಯುತ್ತಾರೆಂದರೆ:

1. ಕಟ್ಟಾಳನ್
2. ಪಿಥಮ್
3. ಚುಟ್ಟಿಕಾರನ್
4. ತಳವಟ್ಟಮ್

**Options :**

485584134645. 1  
485584134646. 2  
485584134647. 3  
485584134648. 4

**Question Number : 348 Question Id : 48558433663 Question Type : MCQ Option Shuffling : No Is Question Mandatory : No Calculator : None Response Time : N.A Think Time : N.A Minimum Instruction Time : 0**

**Correct Marks : 5 Wrong Marks : 1**

**Question Key Details :**

Key	Value
Comprehension	MCQ2

"Abhinaya Chandrika" text is followed by -

1. Manipuri dancers
2. Odissi dancers
3. Kathakali dancers
4. Kathak dancers

**Options :**

485584134649. 1  
485584134650. 2  
485584134651. 3  
485584134652. 4

**Question Number : 348 Question Id : 48558433663 Question Type : MCQ Option Shuffling : No Is Question Mandatory : No Calculator : None Response Time : N.A Think Time : N.A Minimum Instruction Time : 0**

**Correct Marks : 5 Wrong Marks : 1**

**Question Key Details :**

Key	Value
Comprehension	MCQ2

"ಅಭಿನಯ ಚಂದ್ರಿಕ" ಬರಹವು ಅನುಸರಿಸಲ್ಪಡುವುದು ಇವರಿಂದ:

1. ಮಣಿಪುರಿ ನೃತ್ಯಗಾರರು
2. ಒಡಿಸ್ಸಿ ನೃತ್ಯಗಾರರು
3. ಕಥಕಳಿ ನೃತ್ಯಗಾರರು
4. ಕಥಕ್ ನೃತ್ಯಗಾರರು

**Options :**

485584134649. 1  
485584134650. 2  
485584134651. 3  
485584134652. 4

**Question Number : 349 Question Id : 48558433664 Question Type : MCQ Option Shuffling : No Is Question Mandatory : No Calculator : None Response Time : N.A Think Time : N.A Minimum Instruction Time : 0**

**Correct Marks : 5 Wrong Marks : 1**

**Question Key Details :**

Key	Value
Comprehension	MCQ2

Which among the following is the famous 'couple dancer' of Kuchipudi dance style?

1. Singhajeet Singh and Charu Singh
2. Maulik Shah and Ishira Parekh
3. Raja and Radha Reddy
4. V. P. Dhananjayan and Shanta Dhananjayan

**Options :**

485584134653. 1  
485584134654. 2  
485584134655. 3  
485584134656. 4

**Question Number : 349 Question Id : 48558433664 Question Type : MCQ Option Shuffling : No Is Question Mandatory : No Calculator : None Response Time : N.A Think Time : N.A Minimum Instruction Time : 0**

**Correct Marks : 5 Wrong Marks : 1**

**Question Key Details :**

Key	Value
Comprehension	MCQ2



ಈ ಕೆಳಗಿನವರುಗಳಲ್ಲಿ ಕುಚಿಪುಡಿ ನೃತ್ಯ ಶೈಲಿಯ ಪ್ರಸಿದ್ಧ "ನೃತ್ಯ ದಂಪತಿ" ಯಾರು?

1. ಸಿಂಘಜೀತ್ ಸಿಂಗ್ ಮತ್ತು ಚಾರು ಸಿಂಗ್
2. ಮೌಲಿಕ್ ಪಾ ಮತ್ತು ಇಷಿರಾ ಪಾರೇಖ್
3. ರಾಜಾ ಮತ್ತು ರಾಧಾ ರೆಡ್ಡಿ
4. ವಿ.ಪಿ. ಧನಂಜಯನ್ ಮತ್ತು ಶಾಂತಾ ಧನಂಜಯನ್

**Options :**

485584134653. 1  
485584134654. 2  
485584134655. 3  
485584134656. 4

**Question Number : 350 Question Id : 48558433665 Question Type : MCQ Option Shuffling : No Is Question Mandatory : No Calculator : None Response Time : N.A Think Time : N.A Minimum Instruction Time : 0**

**Correct Marks : 5 Wrong Marks : 1**

**Question Key Details :**

Key	Value
Comprehension	MCQ2

Who is a Sattriya exponent among the following?

1. Jatin Goswami
2. V. P. Dhananjaya
3. Charan Girdhar Chand
4. Shashdhar Acharya

**Options :**

485584134657. 1  
485584134658. 2  
485584134659. 3  
485584134660. 4

**Question Number : 350 Question Id : 48558433665 Question Type : MCQ Option Shuffling : No Is Question Mandatory : No Calculator : None Response Time : N.A Think Time : N.A Minimum Instruction Time : 0**

**Correct Marks : 5 Wrong Marks : 1**

**Question Key Details :**

Key	Value
Comprehension	MCQ2

ಕೆಲಗಿನವುಗಳಲ್ಲಿ ಸತ್ಯಯಾದ ಪ್ರತಿಪಾದಕರು ಯಾರು?

1. ಜತಿನ ಗೋಸ್ವಾಮಿ
2. ವಿ.ಪಿ. ಧನಂಜಯ
3. ಚರಣ್ ಗಿರಿಧರ್ ಚಾಂದ್
4. ಶಶಿಧರ್ ಆಚಾರ್ಯ

**Options :**

485584134657. 1  
485584134658. 2  
485584134659. 3  
485584134660. 4

**Question Number : 351 Question Id : 48558433666 Question Type : MCQ Option Shuffling : No Is Question Mandatory : No Calculator : None Response Time : N.A Think Time : N.A Minimum Instruction Time : 0**

**Correct Marks : 5 Wrong Marks : 1**

**Question Key Details :**

Key	Value
Comprehension	MCQ2

What are head movements called in Abhinayadarpanam?

1. Shirobheda
2. Padabheda
3. Hastabheda
4. Drishtibheda

**Options :**

485584134661. 1  
485584134662. 2  
485584134663. 3  
485584134664. 4

**Question Number : 351 Question Id : 48558433666 Question Type : MCQ Option Shuffling : No Is Question Mandatory : No Calculator : None Response Time : N.A Think Time : N.A Minimum Instruction Time : 0**

**Correct Marks : 5 Wrong Marks : 1**

**Question Key Details :**

Key	Value
Comprehension	MCQ2

"ಅಭಿನಯ ದರ್ಪಣಮ್"ದಲ್ಲಿನ ಶಿರ ಚಲನೆಗಳನ್ನು ಏನೆಂದು ಕರೆಯುತ್ತಾರೆ?

1. ಶೀರೋಭೇದ
2. ಪಾದಭೇದ
3. ಹಸ್ತಭೇದ
4. ದೃಷ್ಟಿಭೇದ

**Options :**

485584134661. 1  
485584134662. 2  
485584134663. 3  
485584134664. 4

**Question Number : 352 Question Id : 48558433667 Question Type : MCQ Option Shuffling : No Is Question Mandatory : No Calculator : None Response Time : N.A Think Time : N.A Minimum Instruction Time : 0**

**Correct Marks : 5 Wrong Marks : 1**

**Question Key Details :**

Key	Value
Comprehension	MCQ2

Which is the oldest university with Dance and Music Departments in Gujarat?

1. Benaras Hindu University
2. Rabindra Bharati University
3. The Maharaja Sayajirao university
4. Raja Mansingh Tomar University

**Options :**

485584134665. 1  
485584134666. 2  
485584134667. 3  
485584134668. 4

**Question Number : 352 Question Id : 48558433667 Question Type : MCQ Option Shuffling : No Is Question Mandatory : No Calculator : None Response Time : N.A Think Time : N.A Minimum Instruction Time : 0**

**Correct Marks : 5 Wrong Marks : 1**

**Question Key Details :**

Key	Value
Comprehension	MCQ2

ಗುಜರಾತಿನಲ್ಲಿ ನೃತ್ಯ ಮತ್ತು ಸಂಗೀತ ಇಲಾಖೆಗಳ ಅತ್ಯಂತ ಹಳೆಯದಾದ ವಿಶ್ವವಿದ್ಯಾನಿಲಯ ಯಾವುದು?

1. ಬನಾರಸ್ ಹಿಂದೂ ವಿಶ್ವವಿದ್ಯಾನಿಲಯ
2. ರವೀಂದ್ರ ಭಾರತಿ ವಿಶ್ವವಿದ್ಯಾನಿಲಯ
3. ಮಹಾರಾಜ ಸಯ್ಯಾಜಿರಾವ್ ವಿಶ್ವವಿದ್ಯಾನಿಲಯ
4. ರಾಜ ಮಾನಸಿಂಗ್ ತೋಮರ್ ವಿಶ್ವವಿದ್ಯಾನಿಲಯ

**Options :**

485584134665. 1  
485584134666. 2  
485584134667. 3  
485584134668. 4

**Question Number : 353 Question Id : 48558433668 Question Type : MCQ Option Shuffling : No Is Question Mandatory : No Calculator : None Response Time : N.A Think Time : N.A Minimum Instruction Time : 0**

**Correct Marks : 5 Wrong Marks : 1**

**Question Key Details :**

Key	Value
Comprehension	MCQ2

"Gat" and "Gat Bhaav" are the items of which classical dance form?

1. Kathakali
2. Sattriya
3. Kathak
4. Bharatanatyam

**Options :**

485584134669. 1  
485584134670. 2  
485584134671. 3  
485584134672. 4

**Question Number : 353 Question Id : 48558433668 Question Type : MCQ Option Shuffling : No Is Question Mandatory : No Calculator : None Response Time : N.A Think Time : N.A Minimum Instruction Time : 0**

**Correct Marks : 5 Wrong Marks : 1**

**Question Key Details :**

Key	Value
Comprehension	MCQ2

"ಗತ್" ಮತ್ತು "ಗತ್ ಭಾವ"ಗಳು ಯಾವ ಶಾಸ್ತ್ರೀಯ ನೃತ್ಯ ರೂಪಕದ ವಿಧಗಳು?

1. ಕಥಕಳಿ
2. ಸಾತ್ರಿಯಾ
3. ಕಥಕ್
4. ಭರತನಾಟ್ಯಂ

**Options :**

485584134669. 1  
485584134670. 2  
485584134671. 3  
485584134672. 4

**Question Number : 354 Question Id : 48558433669 Question Type : MCQ Option Shuffling : No Is Question Mandatory : No Calculator : None Response Time : N.A Think Time : N.A Minimum Instruction Time : 0**

**Correct Marks : 5 Wrong Marks : 1**

**Question Key Details :**

Key	Value
Comprehension	MCQ2

What is head gear called in Kathakali aharya?

1. Kalari
2. Sopanam
3. Kiritam
4. Vesham

**Options :**

485584134673. 1  
485584134674. 2  
485584134675. 3  
485584134676. 4

**Question Number : 354 Question Id : 48558433669 Question Type : MCQ Option Shuffling : No Is Question Mandatory : No Calculator : None Response Time : N.A Think Time : N.A Minimum Instruction Time : 0**

**Correct Marks : 5 Wrong Marks : 1**

**Question Key Details :**

Key	Value
Comprehension	MCQ2

ಕಥಕಳಿ ಆಹಾರ್ಯದಲ್ಲಿನ ಶಿರ ಸಾಢಗ್ಗಿಗಲನ್ನು ಏನೆನ್ನುತ್ತಾರೆ?

1. ಕಾಲಾರಿ
2. ಸೋಪಾನಢ್
3. ಕಿರೀಟಢ್
4. ವೇಷಢ್

**Options :**

485584134673. 1  
485584134674. 2  
485584134675. 3  
485584134676. 4

**Question Number : 355 Question Id : 48558433670 Question Type : MCQ Option Shuffling : No Is Question Mandatory : No Calculator : None Response Time : N.A Think Time : N.A Minimum Instruction Time : 0**

**Correct Marks : 5 Wrong Marks : 1**

**Question Key Details :**

Key	Value
Comprehension	MCQ2

'Geetam Vadyam tatha Nrityam tryam \_\_\_\_\_ muchyate' indicates:

1. Tandava
2. Nritya
3. Lasya
4. Sangeet

**Options :**

485584134677. 1  
485584134678. 2  
485584134679. 3  
485584134680. 4

**Question Number : 355 Question Id : 48558433670 Question Type : MCQ Option Shuffling : No Is Question Mandatory : No Calculator : None Response Time : N.A Think Time : N.A Minimum Instruction Time : 0**

**Correct Marks : 5 Wrong Marks : 1**

**Question Key Details :**

Key	Value
Comprehension	MCQ2

"ಗೀತಂ ವಾದ್ಯಂ ತಥಾ ನೃತ್ಯಂ ತ್ರಯಂ \_\_\_\_\_ ಮುಚ್ಯತೇ"

1. ತಾಂಡವ
2. ನೃತ್ಯ
3. ಲಾಸ್ಯ
4. ಸಂಗೀತ

**Options :**

485584134677. 1  
485584134678. 2  
485584134679. 3  
485584134680. 4

**Question Number : 356 Question Id : 48558433671 Question Type : MCQ Option Shuffling : No Is Question Mandatory : No Calculator : None Response Time : N.A Think Time : N.A Minimum Instruction Time : 0**

**Correct Marks : 5 Wrong Marks : 1**

**Question Key Details :**

Key	Value
Comprehension	MCQ2

What is the stylised representation called according to Natyashastra?

1. Bharati
2. Kaishiki
3. Vrittis
4. Natyadharmi

**Options :**

485584134681. 1  
485584134682. 2  
485584134683. 3  
485584134684. 4

**Question Number : 356 Question Id : 48558433671 Question Type : MCQ Option Shuffling : No Is Question Mandatory : No Calculator : None Response Time : N.A Think Time : N.A Minimum Instruction Time : 0**

**Correct Marks : 5 Wrong Marks : 1**

**Question Key Details :**

Key	Value
Comprehension	MCQ2

ನಾಟ್ಯಶಾಸ್ತ್ರದ ಪ್ರಕಾರ ಸೊಗಸಾದ ಪ್ರತಿನಿಧಿಸುವಿಕೆಯನ್ನು ಏನೆನ್ನುತ್ತಾರೆ?

1. ಭಾರತಿ
2. ಕೈಶಿಕಿ
3. ವೃತ್ತಿಗಳು
4. ನಾಟ್ಯಧರ್ಮಿ

**Options :**

485584134681. 1  
485584134682. 2  
485584134683. 3  
485584134684. 4

**Question Number : 357 Question Id : 48558433672 Question Type : MCQ Option Shuffling : No Is Question Mandatory : No Calculator : None Response Time : N.A Think Time : N.A Minimum Instruction Time : 0**

**Correct Marks : 5 Wrong Marks : 1**

**Question Key Details :**

Key	Value
Comprehension	MCQ2

Chandra-Surya-Rakudi are worn by the dancer of :

1. Kathak
2. Bharatanatyam
3. Manipuri
4. Odissi

**Options :**

485584134685. 1  
485584134686. 2  
485584134687. 3  
485584134688. 4

**Question Number : 357 Question Id : 48558433672 Question Type : MCQ Option Shuffling : No Is Question Mandatory : No Calculator : None Response Time : N.A Think Time : N.A Minimum Instruction Time : 0**

**Correct Marks : 5 Wrong Marks : 1**

**Question Key Details :**

Key	Value
Comprehension	MCQ2



ಚಂದ್ರ-ಸೂರ್ಯ-ರಾಕುಡಿಗಳನ್ನು ಧರಿಸುವುದು ಈ ನೃತ್ಯಗಾರರಿಂದ:

1. ಕಥಕ್
2. ಭರತನಾಟ್ಯ
3. ಮಣಿಪುರಿ
4. ಒಡಿಸ್ಸಿ

**Options :**

485584134685. 1  
485584134686. 2  
485584134687. 3  
485584134688. 4

**Question Number : 358 Question Id : 48558433673 Question Type : MCQ Option Shuffling : No Is Question Mandatory : No Calculator : None Response Time : N.A Think Time : N.A Minimum Instruction Time : 0**

**Correct Marks : 5 Wrong Marks : 1**

**Question Key Details :**

Key	Value
Comprehension	MCQ2

Which abhinaya comprises rendering of text and lyrics according to Bharata?

1. Vachika
2. Angika
3. Aharya
4. Satvika

**Options :**

485584134689. 1  
485584134690. 2  
485584134691. 3  
485584134692. 4

**Question Number : 358 Question Id : 48558433673 Question Type : MCQ Option Shuffling : No Is Question Mandatory : No Calculator : None Response Time : N.A Think Time : N.A Minimum Instruction Time : 0**

**Correct Marks : 5 Wrong Marks : 1**

**Question Key Details :**

Key	Value
Comprehension	MCQ2

ಯಾವ ಅಭಿನಯವು ಭರತನ ಪ್ರಕಾರ ಬರಹ ಮತ್ತು ಸಾಹಿತ್ಯದ ಪ್ರಕಟಗೊಳ್ಳುವಿಕೆಯನ್ನು ಒಳಗೊಂಡಿದೆ?

1. ವಾಚಿಕ
2. ಆಂಗಿಕ
3. ಆಹಾರ್ಯ
4. ಸಾತ್ವಿಕ

**Options :**

485584134689. 1  
485584134690. 2  
485584134691. 3  
485584134692. 4

**Question Number : 359 Question Id : 48558433674 Question Type : MCQ Option Shuffling : No Is Question Mandatory : No Calculator : None Response Time : N.A Think Time : N.A Minimum Instruction Time : 0**

**Correct Marks : 5 Wrong Marks : 1**

**Question Key Details :**

Key	Value
Comprehension	MCQ2

In which dance, performers perform the compositions of Mahant Shankar Dev?

1. Mohiniattam
2. Kathak
3. Sattriya
4. Kuchipudi

**Options :**

485584134693. 1  
485584134694. 2  
485584134695. 3  
485584134696. 4

**Question Number : 359 Question Id : 48558433674 Question Type : MCQ Option Shuffling : No Is Question Mandatory : No Calculator : None Response Time : N.A Think Time : N.A Minimum Instruction Time : 0**

**Correct Marks : 5 Wrong Marks : 1**

**Question Key Details :**

Key	Value
Comprehension	MCQ2

ಯಾವ ನೃತ್ಯದಲ್ಲಿ ಪ್ರದರ್ಶಕರು ಮಹಂತ ಶಂಕರ ದೇವನ ಸಂಯೋಜನೆಯನ್ನು ಪ್ರದರ್ಶಿಸುತ್ತಾರೆ?

1. ಮೋಹಿನಿಯಾಟ್ಟಂ
2. ಕಥಕ್
3. ಸಾತ್ರಿಯಾ
4. ಕುಚಿಪುಡಿ

**Options :**

485584134693. 1  
485584134694. 2  
485584134695. 3  
485584134696. 4

**Question Number : 360 Question Id : 48558433675 Question Type : MCQ Option Shuffling : No Is Question Mandatory : No Calculator : None Response Time : N.A Think Time : N.A Minimum Instruction Time : 0**

**Correct Marks : 5 Wrong Marks : 1**

**Question Key Details :**

Key	Value
Comprehension	MCQ2

What is the earthen pot musical instrument called?

1. Ghatam
2. Morsing
3. Nattuva talam
4. Gajje

**Options :**

485584134697. 1  
485584134698. 2  
485584134699. 3  
485584134700. 4

**Question Number : 360 Question Id : 48558433675 Question Type : MCQ Option Shuffling : No Is Question Mandatory : No Calculator : None Response Time : N.A Think Time : N.A Minimum Instruction Time : 0**

**Correct Marks : 5 Wrong Marks : 1**

**Question Key Details :**

Key	Value
Comprehension	MCQ2

ಮಣ್ಣಿನ ಮಡಿಕೆ ಸಂಗೀತ ಸಾಧನವನ್ನು ಏನೆನ್ನುತ್ತಾರೆ?

1. ಘಟಂ
2. ಮೋರ್ಸಿಂಗ್
3. ನಾಟ್ಯವ ತಾಳಂ
4. ಗೆಜ್ಜೆ

**Options :**

485584134697. 1  
485584134698. 2  
485584134699. 3  
485584134700. 4

**Question Number : 361 Question Id : 48558433676 Question Type : MCQ Option Shuffling : No Is Question Mandatory : No Calculator : None Response Time : N.A Think Time : N.A Minimum Instruction Time : 0**

**Correct Marks : 5 Wrong Marks : 1**

**Question Key Details :**

Key	Value
Comprehension	MCQ2

Percussion instruments used in classical dances:

- A. Dholak
- B. Tabla
- C. Mridangam
- D. Dholaki
- E. Khol

Choose the answer from the options given below:

1. A, C, D only
2. A, B, C only
3. A, D, E only
4. B, C, E only

**Options :**

485584134701. 1  
485584134702. 2  
485584134703. 3  
485584134704. 4

**Question Number : 361 Question Id : 48558433676 Question Type : MCQ Option Shuffling : No Is Question Mandatory : No Calculator : None Response Time : N.A Think Time : N.A Minimum Instruction Time : 0**

**Correct Marks : 5 Wrong Marks : 1**

**Question Key Details :**

Key	Value
Comprehension	MCQ2

ಲಯ ವಾದ್ಯ ಸಾಧನಗಳನ್ನು ಶಾಸ್ತ್ರೀಯ ನೃತ್ಯಗಳಲ್ಲಿ ಬಳಸುವುದು ಯಾವುದೆಂದರೆ:

- A. ಡೋಲಕ್
- B. ತಬಲ
- C. ಮೃದಂಗಂ
- D. ಡೋಲಕಿ
- E. ಖೋಲ್

ಕೆಳಗೆ ನೀಡಿರುವ ಆಯ್ಕೆಗಳಿಂದ ಸರಿಯಾದ ಉತ್ತರವನ್ನು ಆರಿಸಿ:

- 1. A, C, D ಮಾತ್ರ
- 2. A, B, C ಮಾತ್ರ
- 3. A, D, E ಮಾತ್ರ
- 4. B, C, E ಮಾತ್ರ

**Options :**

- 485584134701. 1
- 485584134702. 2
- 485584134703. 3
- 485584134704. 4

**Question Number : 362 Question Id : 48558433677 Question Type : MCQ Option Shuffling : No Is Question Mandatory : No Calculator : None Response Time : N.A Think Time : N.A Minimum Instruction Time : 0**

**Correct Marks : 5 Wrong Marks : 1**

**Question Key Details :**

Key	Value
Comprehension	MCQ2

Lasya dance is characterised as:

- A. Forceful
- B. Delicate
- C. Graceful
- D. Gentle
- E. Bold

Choose the correct answer from the options given below:

- 1. A, C, E only
- 2. B, C, D only
- 3. B, D, E only
- 4. A, B, D only

**Options :**

- 485584134705. 1
- 485584134706. 2
- 485584134707. 3

485584134708. 4

**Question Number : 362 Question Id : 48558433677 Question Type : MCQ Option Shuffling : No Is Question Mandatory : No Calculator : None Response Time : N.A Think Time : N.A Minimum Instruction Time : 0**

**Correct Marks : 5 Wrong Marks : 1**

**Question Key Details :**

Key	Value
Comprehension	MCQ2

ಲಾಸ್ಯ ನೃತ್ಯವನ್ನು ಹೀಗೆಂದು ಗುಣಕರಿಸಲಾಗಿದೆ:

- A. ಬಲವಾದ
- B. ನಯವಾದ
- C. ಸುಂದರವಾದ
- D. ಮೃದುವಾದ
- E. ದಿಟ್ಟವಾದ

ಕೆಳಗೆ ನೀಡಿರುವ ಆಯ್ಕೆಗಳಿಂದ ಸರಿಯಾದ ಉತ್ತರವನ್ನು ಆರಿಸಿ:

- 1. A, C, E ಮಾತ್ರ
- 2. B, C, D ಮಾತ್ರ
- 3. B, D, E ಮಾತ್ರ
- 4. A, B, D ಮಾತ್ರ

**Options :**

- 485584134705. 1
- 485584134706. 2
- 485584134707. 3
- 485584134708. 4

**Question Number : 363 Question Id : 48558433678 Question Type : MCQ Option Shuffling : No Is Question Mandatory : No Calculator : None Response Time : N.A Think Time : N.A Minimum Instruction Time : 0**

**Correct Marks : 5 Wrong Marks : 1**

**Question Key Details :**

Key	Value
Comprehension	MCQ2

Trace three "Sthayi Bhaav" from the following:

- A. Rati
- B. Nirveda
- C. Krodh
- D. Aalamban
- E. Uddipan

Choose the correct answer from the options given below:

- 1. A, D, E only
- 2. A, B, C only
- 3. C, D, E only
- 4. B, D, E only

**Options :**

- 485584134709. 1
- 485584134710. 2
- 485584134711. 3
- 485584134712. 4

**Question Number : 363 Question Id : 48558433678 Question Type : MCQ Option Shuffling : No Is Question Mandatory : No Calculator : None Response Time : N.A Think Time : N.A Minimum Instruction Time : 0**

**Correct Marks : 5 Wrong Marks : 1**

**Question Key Details :**

Key	Value
Comprehension	MCQ2

ಕೆಲಗಿನವುಗಳಿಂದ ಮೂರು "ಸ್ಥಾಯಿ ಭಾವಗಳನ್ನು" ಪತ್ತೆ ಹಚ್ಚಿ:

- A. ರತಿ
- B. ನಿರ್ವೇದ
- C. ಕ್ರೋಧ
- D. ಆಲಂಬನ
- E. ಉದ್ಧೀಪನ

ಕೆಲಗೆ ನೀಡಿರುವ ಆಯ್ಕೆಗಳಿಂದ ಸರಿಯಾದ ಉತ್ತರವನ್ನು ಆರಿಸಿ:

- 1. A, D, E ಮಾತ್ರ
- 2. A, B, C ಮಾತ್ರ
- 3. C, D, E ಮಾತ್ರ
- 4. B, D, E ಮಾತ್ರ

**Options :**

- 485584134709. 1
- 485584134710. 2

485584134711. 3

485584134712. 4

**Question Number : 364 Question Id : 48558433679 Question Type : MCQ Option Shuffling : No Is Question Mandatory : No Calculator : None Response Time : N.A Think Time : N.A Minimum Instruction Time : 0**

**Correct Marks : 5 Wrong Marks : 1**

**Question Key Details :**

Key	Value
Comprehension	MCQ2

Choose rasas from the following:

- A. Tandava
- B. Hasya
- C. Beebhatsa
- D. Lasya
- E. Bhayanaka

Choose the correct answer from the options given below:

- 1. A, C, E only
- 2. B, D, E only
- 3. A, C, D only
- 4. B, C, E only

**Options :**

485584134713. 1

485584134714. 2

485584134715. 3

485584134716. 4

**Question Number : 364 Question Id : 48558433679 Question Type : MCQ Option Shuffling : No Is Question Mandatory : No Calculator : None Response Time : N.A Think Time : N.A Minimum Instruction Time : 0**

**Correct Marks : 5 Wrong Marks : 1**

**Question Key Details :**

Key	Value
Comprehension	MCQ2



ಕೆಳಗಿನವುಗಳಿಂದ ರಸಗಳನ್ನು ಆರಿಸಿ:

- A. ತಾಂಡವ
- B. ಹಾಸ್ಯ
- C. ಭೀಭತ್ಯ
- D. ಲಾಸ್ಯ
- E. ಭಯಾನಕ

ಕೆಳಗೆ ನೀಡಿರುವ ಆಯ್ಕೆಗಳಿಂದ ಸರಿಯಾದ ಉತ್ತರವನ್ನು ಆರಿಸಿ::

- 1. A, C, E ಮಾತ್ರ
- 2. B, D, E ಮಾತ್ರ
- 3. A, C, D ಮಾತ್ರ
- 4. B, C, E ಮಾತ್ರ

**Options :**

- 485584134713. 1
- 485584134714. 2
- 485584134715. 3
- 485584134716. 4

**Question Number : 365 Question Id : 48558433680 Question Type : MCQ Option Shuffling : No Is Question Mandatory : No Calculator : None Response Time : N.A Think Time : N.A Minimum Instruction Time : 0**

**Correct Marks : 5 Wrong Marks : 1**

**Question Key Details :**

Key	Value
Comprehension	MCQ2

Which two are not "Rasa" from among the following?

- A. Aashcharya
- B. Adbhut
- C. Nirveda
- D. Karuna
- E. Roudra

Choose the correct answer from the options given below:

- 1. A and C only
- 2. A and D only
- 3. B and D only
- 4. A and E only

**Options :**

- 485584134717. 1
- 485584134718. 2
- 485584134719. 3
- 485584134720. 4

Question Number : 365 Question Id : 48558433680 Question Type : MCQ Option Shuffling : No Is Question Mandatory : No Calculator : None Response Time : N.A Think Time : N.A Minimum Instruction Time : 0

Correct Marks : 5 Wrong Marks : 1

Question Key Details :

Key	Value
Comprehension	MCQ2

ಕೆಳಗಿನವುಗಳಲ್ಲಿ ಯಾವುದು ಎರಡು "ರಸ"ಗಳಲ್ಲ?

- A. ಆಶ್ಚರ್ಯ
- B. ಅದ್ಭುತ
- C. ನಿರ್ವೇದ
- D. ಕರುಣ
- E. ರೌದ್ರ

ಕೆಳಗೆ ನೀಡಿರುವ ಆಯ್ಕೆಗಳಿಂದ ಸರಿಯಾದ ಉತ್ತರವನ್ನು ಆರಿಸಿ:

- 1. A ಮತ್ತು C ಮಾತ್ರ
- 2. A ಮತ್ತು D ಮಾತ್ರ
- 3. B ಮತ್ತು D ಮಾತ್ರ
- 4. A ಮತ್ತು E ಮಾತ್ರ

Options :

- 485584134717. 1
- 485584134718. 2
- 485584134719. 3
- 485584134720. 4

Question Number : 366 Question Id : 48558433681 Question Type : MCQ Option Shuffling : No Is Question Mandatory : No Calculator : None Response Time : N.A Think Time : N.A Minimum Instruction Time : 0

Correct Marks : 5 Wrong Marks : 1

Question Key Details :

Key	Value
Comprehension	MCQ2

Match List I with List II

LIST I		LIST II	
A.	Haas	I.	Veer
B.	Utsah	II.	Hasya
C.	Rati	III.	Karun
D.	Shoka	IV.	Shringar

Choose the correct answer from the options given below:

1. A-I, B-II, C-III, D-IV
2. A-II, B-III, C-I, D-IV
3. A-II, B-I, C-IV, D-III
4. A-IV, B-III, C-II, D-I

**Options :**

485584134721. 1  
485584134722. 2  
485584134723. 3  
485584134724. 4

**Question Number : 366 Question Id : 48558433681 Question Type : MCQ Option Shuffling : No Is Question Mandatory : No Calculator : None Response Time : N.A Think Time : N.A Minimum Instruction Time : 0**

**Correct Marks : 5 Wrong Marks : 1**

**Question Key Details :**

Key	Value
Comprehension	MCQ2

ಪಟ್ಟಿ - I ಅನ್ನು ಪಟ್ಟಿ - IIರ ಜೊತೆ ಹೊಂದಿಸಿ:

ಪಟ್ಟಿ - I		ಪಟ್ಟಿ - II	
A.	ಹಾಸ	I.	ವೀರ
B.	ಉತ್ಸಾಹ	II.	ಹಾಸ್ಯ
C.	ರತಿ	III.	ಕರುಣ
D.	ಶೋಕ	IV.	ಶೃಂಗಾರ

ಕೆಳಗೆ ನೀಡಿರುವ ಆಯ್ಕೆಗಳಿಂದ ಸರಿಯಾದ ಉತ್ತರವನ್ನು ಆರಿಸಿ:

1. A-I, B-II, C-III, D-IV
2. A-II, B-III, C-I, D-IV
3. A-II, B-I, C-IV, D-III
4. A-IV, B-III, C-II, D-I

**Options :**

485584134721. 1  
485584134722. 2  
485584134723. 3  
485584134724. 4

**Question Number : 367 Question Id : 48558433682 Question Type : MCQ Option Shuffling : No Is Question Mandatory : No Calculator : None Response Time : N.A Think Time : N.A Minimum Instruction Time : 0 Correct Marks : 5 Wrong Marks : 1**

**Question Key Details :**

Key	Value
Comprehension	MCQ2

Match List I with List II

LIST I		LIST II	
A.	Alarippu	I.	Kathak
B.	Pallavi	II.	Odissi
C.	Jiva	III.	Bharatanatyam
D.	Tarana	IV.	Mohiniattam

Choose the correct answer from the options given below:

1. A-III, B-II, C-IV, D-I
2. A-II, B-I, C-III, D-IV
3. A-IV, B-III, C-II, D-I
4. A-I, B-III, C-II, D-IV

**Options :**

- 485584134725. 1
- 485584134726. 2
- 485584134727. 3
- 485584134728. 4

**Question Number : 367 Question Id : 48558433682 Question Type : MCQ Option Shuffling : No Is Question Mandatory : No Calculator : None Response Time : N.A Think Time : N.A Minimum Instruction Time : 0 Correct Marks : 5 Wrong Marks : 1**

**Question Key Details :**

Key	Value
Comprehension	MCQ2

ಪಟ್ಟಿ - I ಅನ್ನು ಪಟ್ಟಿ - IIರ ಜೊತೆ ಹೊಂದಿಸಿ.

ಪಟ್ಟಿ - I		ಪಟ್ಟಿ - II	
A.	ಆಲರಿಪ್ಪು	I.	ಕಥಕ್
B.	ಪಲ್ಲವಿ	II.	ಒಡಿಸ್ಸಿ
C.	ಜೀವ	III.	ಭರತನಾಟ್ಯಂ
D.	ತರಾನಾ	IV.	ಮೋಹಿನಿಯಾಟ್ಯಂ

ಕೆಳಗೆ ನೀಡಿರುವ ಆಯ್ಕೆಗಳಿಂದ ಸರಿಯಾದ ಉತ್ತರವನ್ನು ಆರಿಸಿ:

1. A-III, B-II, C-IV, D-I
2. A-II, B-I, C-III, D-IV
3. A-IV, B-III, C-II, D-I
4. A-I, B-III, C-II, D-IV

**Options :**

485584134725. 1  
485584134726. 2  
485584134727. 3  
485584134728. 4

**Question Number : 368 Question Id : 48558433683 Question Type : MCQ Option Shuffling : No Is Question Mandatory : No Calculator : None Response Time : N.A Think Time : N.A Minimum Instruction Time : 0**

**Correct Marks : 5 Wrong Marks : 1**

**Question Key Details :**

Key	Value
Comprehension	MCQ2

Match List I with List II

LIST I		LIST II	
A.	Cause - Determinants	I.	Vyabhichari bhava
B.	Consequences-reactions	II.	Rasa
C.	Complementary expression	III.	Vibhava
D.	Sentiment	IV.	Anubhava

Choose the correct answer from the options given below:

1. A-II, B-I, C-III, D-IV
2. A-III, B-IV, C-I, D-II
3. A-IV, B-II, C-III, D-I
4. A-I, B-III, C-II, D-IV

**Options :**

485584134729. 1  
485584134730. 2  
485584134731. 3  
485584134732. 4

Question Number : 368 Question Id : 48558433683 Question Type : MCQ Option Shuffling : No Is Question Mandatory : No Calculator : None Response Time : N.A Think Time : N.A Minimum Instruction Time : 0  
Correct Marks : 5 Wrong Marks : 1

Question Key Details :

Key	Value
Comprehension	MCQ2

ಪಟ್ಟಿ - I ಅನ್ನು ಪಟ್ಟಿ - II ರ ಜೊತೆ ಹೊಂದಿಸಿ.

ಪಟ್ಟಿ - I		ಪಟ್ಟಿ - II	
A.	ಕಾರಣ-ನಿರ್ಧಾರಕಗಳು	I.	ವ್ಯಭಿಚಾರಿ ಭಾವ
B.	ಪರಿಣಾಮಗಳು-ಪ್ರತಿಕ್ರಿಯೆಗಳು	II.	ರಸ
C.	ಪೂರಕ ಪ್ರಕಟಣೆ	III.	ವಿಭವ
D.	ಭಾವನೆ	IV.	ಅನುಭವ

ಕೆಳಗೆ ನೀಡಿರುವ ಆಯ್ಕೆಗಳಿಂದ ಸರಿಯಾದ ಉತ್ತರವನ್ನು ಆರಿಸಿ:

1. A-II, B-I, C-III, D-IV
2. A-III, B-IV, C-I, D-II
3. A-IV, B-II, C-III, D-I
4. A-I, B-III, C-II, D-IV

Options :

485584134729. 1  
485584134730. 2  
485584134731. 3  
485584134732. 4

Question Number : 369 Question Id : 48558433684 Question Type : MCQ Option Shuffling : No Is Question Mandatory : No Calculator : None Response Time : N.A Think Time : N.A Minimum Instruction Time : 0

Correct Marks : 5 Wrong Marks : 1

Question Key Details :

Key	Value
Comprehension	MCQ2

Match List I with List II

LIST I		LIST II	
A.	Odiyanam	I.	ear ornament
B.	Chandra-Surya	II.	three round balls attached to hair
C.	Kunjalam	III.	head ornament
D.	Jhumiki	IV.	belt

Choose the correct answer from the options given below:

1. A-II, B-I, C-III, D-IV
2. A-III, B-IV, C-I, D-II
3. A-I, B-IV, C-III, D-II
4. A-IV, B-III, C-II, D-I

**Options :**

485584134733. 1  
485584134734. 2  
485584134735. 3  
485584134736. 4

**Question Number : 369 Question Id : 48558433684 Question Type : MCQ Option Shuffling : No Is Question Mandatory : No Calculator : None Response Time : N.A Think Time : N.A Minimum Instruction Time : 0**

**Correct Marks : 5 Wrong Marks : 1**

**Question Key Details :**

Key	Value
Comprehension	MCQ2

ಪಟ್ಟಿ - I ಅನ್ನು ಪಟ್ಟಿ - IIರ ಜೊತೆ ಹೊಂದಿಸಿ.

ಪಟ್ಟಿ - I		ಪಟ್ಟಿ - II	
A.	ಒಡಿಯಾಣಂ	I.	ಕಿವಿ ಆಭರಣ
B.	ಚಂದ್ರ-ಸೂರ್ಯ	II.	ಮೂರು ಉರುಟಾದ ಚೆಂಡುಗಳು ಕೂದಲಿಗೆ ಅಂಟಿಕೊಂಡಿರುವುದು
C.	ಕುಂಜಲಂ	III.	ಶಿರ ಆಭರಣ
D.	ಜುಮುಕಿ	IV.	ಬೆಲ್ಟ್

ಕೆಳಗೆ ನೀಡಿರುವ ಆಯ್ಕೆಗಳಿಂದ ಸರಿಯಾದ ಉತ್ತರವನ್ನು ಆರಿಸಿ:

1. A-II, B-I, C-III, D-IV
2. A-III, B-IV, C-I, D-II
3. A-I, B-IV, C-III, D-II
4. A-IV, B-III, C-II, D-I

**Options :**

485584134733. 1  
485584134734. 2  
485584134735. 3  
485584134736. 4

**Question Number : 370 Question Id : 48558433685 Question Type : MCQ Option Shuffling : No Is Question Mandatory : No Calculator : None Response Time : N.A Think Time : N.A Minimum Instruction Time : 0 Correct Marks : 5 Wrong Marks : 1**

**Question Key Details :**

Key	Value
Comprehension	MCQ2

Give the correct order of the following rasas according to Natyashastra:

- A. Raudra
- B. Hasya
- C. Veera
- D. Shringara
- E. Karuna

Choose the correct answer from the options given below:

- 1. B, A, E, D, C
- 2. D, C, A, E, B
- 3. A, C, E, B, D
- 4. D, B, E, A, C

**Options :**

- 485584134737. 1
- 485584134738. 2
- 485584134739. 3
- 485584134740. 4

**Question Number : 370 Question Id : 48558433685 Question Type : MCQ Option Shuffling : No Is Question Mandatory : No Calculator : None Response Time : N.A Think Time : N.A Minimum Instruction Time : 0 Correct Marks : 5 Wrong Marks : 1**

**Question Key Details :**

Key	Value
Comprehension	MCQ2



ನಾಟ್ಯಶಾಸ್ತ್ರದ ಪ್ರಕಾರ ಕೆಳಗಿನ ರಸಗಳ ಸರಿಯಾದ ಕ್ರಮವನ್ನು ನೀಡಿ:

- A. ರೌದ್ರ
- B. ಹಾಸ್ಯ
- C. ವೀರ
- D. ಶೃಂಗಾರ
- E. ಕರುಣ

ಕೆಳಗೆ ನೀಡಿರುವ ಆಯ್ಕೆಗಳಿಂದ ಸರಿಯಾದ ಉತ್ತರವನ್ನು ಆರಿಸಿ:

- 1. B, A, E, D, C
- 2. D, C, A, E, B
- 3. A, C, E, B, D
- 4. D, B, E, A, C

**Options :**

- 485584134737. 1
- 485584134738. 2
- 485584134739. 3
- 485584134740. 4

## Percussion Music

Section Id :	485584865
Section Number :	4
Section type :	Online
Mandatory or Optional :	Optional
Number of Questions :	25
Number of Questions to be attempted :	20
Section Marks :	100
Enable Mark as Answered Mark for Review and Clear Response :	Yes
Maximum Instruction Time :	0
Sub-Section Number :	1
Sub-Section Id :	4855842440
Question Shuffling Allowed :	Yes
Is Section Default? :	null

Question Number : 371 Question Id : 48558433686 Question Type : MCQ Option Shuffling : No Is Question Mandatory : No Calculator : None Response Time : N.A Think Time : N.A Minimum Instruction Time : 0

Correct Marks : 5 Wrong Marks : 1

Question Key Details :

Key	Value
Comprehension	MCQ3

Zakir Hussain belongs to which of the following Tabla gharanas?

1. Punjab
2. Delhi
3. Ajrada
4. Lucknow

**Options :**

485584134741. 1  
485584134742. 2  
485584134743. 3  
485584134744. 4

**Question Number : 371 Question Id : 48558433686 Question Type : MCQ Option Shuffling : No Is Question Mandatory : No Calculator : None Response Time : N.A Think Time : N.A Minimum Instruction Time : 0**

**Correct Marks : 5 Wrong Marks : 1**

**Question Key Details :**

Key	Value
Comprehension	MCQ3

ಯೂಕೀರ್ ಹುಸ್ಸೈನಾರು ಕೆಲಗಿನ ಯಾವ ತಬಲ ಘರಾನಾಗಳಿಗೆ ಸೇರುತ್ತಾರೆ?

1. ಪಂಜಾಬ್
2. ದೆಹಲಿ
3. ಅಜರಾದಾ
4. ಲಕ್ನೋ

**Options :**

485584134741. 1  
485584134742. 2  
485584134743. 3  
485584134744. 4

**Question Number : 372 Question Id : 48558433687 Question Type : MCQ Option Shuffling : No Is Question Mandatory : No Calculator : None Response Time : N.A Think Time : N.A Minimum Instruction Time : 0**

**Correct Marks : 5 Wrong Marks : 1**

**Question Key Details :**

Key	Value
Comprehension	MCQ3

Identify the Tala - Dha Ge Na Ti ....

1. Dadra
2. Rupak
3. Kaharwa
4. Sooltala

**Options :**

485584134745. 1  
485584134746. 2  
485584134747. 3  
485584134748. 4

**Question Number : 372 Question Id : 48558433687 Question Type : MCQ Option Shuffling : No Is Question Mandatory : No Calculator : None Response Time : N.A Think Time : N.A Minimum Instruction Time : 0**

**Correct Marks : 5 Wrong Marks : 1**

**Question Key Details :**

Key	Value
Comprehension	MCQ3

ತಾಳ-ಧಾ ಗೇ ನಾ ತೀ ... ಯನ್ನು ಗುರುತಿಸಿ.

1. ದಾದ್ರ
2. ರೂಪಕ್
3. ಕಹಾರ್ವ
4. ಸೂಲ್‌ತಾಳ

**Options :**

485584134745. 1  
485584134746. 2  
485584134747. 3  
485584134748. 4

**Question Number : 373 Question Id : 48558433688 Question Type : MCQ Option Shuffling : No Is Question Mandatory : No Calculator : None Response Time : N.A Think Time : N.A Minimum Instruction Time : 0**

**Correct Marks : 5 Wrong Marks : 1**

**Question Key Details :**

Key	Value
Comprehension	MCQ3

In Natyashastra, which instruments (Vadya) are found similar to Pakhawaj?

1. Ankik
2. Urdhwak
3. Aalingya
4. Jodi

**Options :**

485584134749. 1  
485584134750. 2  
485584134751. 3  
485584134752. 4

**Question Number : 373 Question Id : 48558433688 Question Type : MCQ Option Shuffling : No Is Question Mandatory : No Calculator : None Response Time : N.A Think Time : N.A Minimum Instruction Time : 0**

**Correct Marks : 5 Wrong Marks : 1**

**Question Key Details :**

Key	Value
Comprehension	MCQ3

ನಾಟ್ಯ ಶಾಸ್ತ್ರದಲ್ಲಿ ಯಾವ ಸಾಧನವು (ವಾದ್ಯ) ಪಕ್ಕವಾದ್ಯಕ್ಕೆ ಹೋಲಿಕೆಯಾಗುತ್ತದೆ?

1. ಅಂಕಿತೆ
2. ಉರ್ಧ್ವಕ
3. ಆಲಿಂಗ್ಯ
4. ಜೋಡಿ

**Options :**

485584134749. 1  
485584134750. 2  
485584134751. 3  
485584134752. 4

**Question Number : 374 Question Id : 48558433689 Question Type : MCQ Option Shuffling : No Is Question Mandatory : No Calculator : None Response Time : N.A Think Time : N.A Minimum Instruction Time : 0**

**Correct Marks : 5 Wrong Marks : 1**

**Question Key Details :**

Key	Value
Comprehension	MCQ3

Jhump Tal accompanies which form of music?

1. Hindustani
2. Karnatak
3. Punjabi
4. Hariyanwi

**Options :**

485584134753. 1  
485584134754. 2  
485584134755. 3  
485584134756. 4

**Question Number : 374 Question Id : 48558433689 Question Type : MCQ Option Shuffling : No Is Question Mandatory : No Calculator : None Response Time : N.A Think Time : N.A Minimum Instruction Time : 0**

**Correct Marks : 5 Wrong Marks : 1**

**Question Key Details :**

Key	Value
Comprehension	MCQ3

ಝಂಪ ತಾಳವು ಯಾವ ಸಂಗೀತ ರೂಪದ ಜೊತೆಯಲ್ಲಿರುತ್ತದೆ?

1. ಹಿಂದುಸ್ತಾನಿ
2. ಕರ್ನಾಟಕಿ
3. ಪಂಜಾಬಿ
4. ಹರಿಯಾನ್ವಿ

**Options :**

485584134753. 1  
485584134754. 2  
485584134755. 3  
485584134756. 4

**Question Number : 375 Question Id : 48558433690 Question Type : MCQ Option Shuffling : No Is Question Mandatory : No Calculator : None Response Time : N.A Think Time : N.A Minimum Instruction Time : 0**

**Correct Marks : 5 Wrong Marks : 1**

**Question Key Details :**

Key	Value
Comprehension	MCQ3

Which Tala is accompanied with Dhrupad?

1. Teen Tala
2. Jhump Tala
3. Sooltala
4. Ektala

**Options :**

485584134757. 1  
485584134758. 2  
485584134759. 3  
485584134760. 4

**Question Number : 375 Question Id : 48558433690 Question Type : MCQ Option Shuffling : No Is Question Mandatory : No Calculator : None Response Time : N.A Think Time : N.A Minimum Instruction Time : 0**

**Correct Marks : 5 Wrong Marks : 1**

**Question Key Details :**

Key	Value
Comprehension	MCQ3

ಯಾವ ತಾಳವು ಧ್ರುಪದಾದೊಂದಿಗೆ ಜೊತೆಯಲ್ಲಿರುತ್ತದೆ?

1. ತೀನ್‌ತಾಳ
2. ಜುಂಪ್ ತಾಳ
3. ಸೂಲ್‌ತಾಳ
4. ಏಕತಾಳ

**Options :**

485584134757. 1  
485584134758. 2  
485584134759. 3  
485584134760. 4

**Question Number : 376 Question Id : 48558433691 Question Type : MCQ Option Shuffling : No Is Question Mandatory : No Calculator : None Response Time : N.A Think Time : N.A Minimum Instruction Time : 0**

**Correct Marks : 5 Wrong Marks : 1**

**Question Key Details :**

Key	Value
Comprehension	MCQ3

Which Tala is played with Bhajan?

1. Kaharwa
2. Rudra
3. Lilawati
4. Vishnu

**Options :**

485584134761. 1  
485584134762. 2  
485584134763. 3  
485584134764. 4

**Question Number : 376 Question Id : 48558433691 Question Type : MCQ Option Shuffling : No Is Question Mandatory : No Calculator : None Response Time : N.A Think Time : N.A Minimum Instruction Time : 0**

**Correct Marks : 5 Wrong Marks : 1**

**Question Key Details :**

Key	Value
Comprehension	MCQ3

ಯಾವ ತಾಳವನ್ನು ಭಜನೆಯೊಂದಿಗೆ ನುಡಿಸುತ್ತಾರೆ?

1. ಕಹರ್ವ
2. ರುದ್ರ
3. ಲೀಲಾವತಿ
4. ವಿಷ್ಣು

**Options :**

485584134761. 1  
485584134762. 2  
485584134763. 3  
485584134764. 4

**Question Number : 377 Question Id : 48558433692 Question Type : MCQ Option Shuffling : No Is Question Mandatory : No Calculator : None Response Time : N.A Think Time : N.A Minimum Instruction Time : 0**

**Correct Marks : 5 Wrong Marks : 1**

**Question Key Details :**

Key	Value
Comprehension	MCQ3

Who was the founder of Delhi Gharana?

1. Modu Khan
2. Kallu Khan
3. Siddhar Khan
4. Hasan Khan

**Options :**

485584134765. 1  
485584134766. 2  
485584134767. 3  
485584134768. 4

**Question Number : 377 Question Id : 48558433692 Question Type : MCQ Option Shuffling : No Is Question Mandatory : No Calculator : None Response Time : N.A Think Time : N.A Minimum Instruction Time : 0**

**Correct Marks : 5 Wrong Marks : 1**

**Question Key Details :**

Key	Value
Comprehension	MCQ3

ದೆಹಲಿ ಘರಾನದ ಸಂಸ್ಥಾಪಕರು ಯಾರು?

1. ಮೋಡು ಖಾನ್
2. ಕಲ್ಲು ಖಾನ್
3. ಸಿದ್ಧಾರ್ ಖಾನ್
4. ಹಸನ್ ಖಾನ್

**Options :**

485584134765. 1  
485584134766. 2  
485584134767. 3  
485584134768. 4

**Question Number : 378 Question Id : 48558433693 Question Type : MCQ Option Shuffling : No Is Question Mandatory : No Calculator : None Response Time : N.A Think Time : N.A Minimum Instruction Time : 0**

**Correct Marks : 5 Wrong Marks : 1**

**Question Key Details :**

Key	Value
Comprehension	MCQ3



Mridangam is made from the wood of :

1. Aam (Mango)
2. Shisham
3. Jamun
4. Kathal (Jackfruit)

**Options :**

485584134769. 1  
485584134770. 2  
485584134771. 3  
485584134772. 4

**Question Number : 378 Question Id : 48558433693 Question Type : MCQ Option Shuffling : No Is Question Mandatory : No Calculator : None Response Time : N.A Think Time : N.A Minimum Instruction Time : 0**

**Correct Marks : 5 Wrong Marks : 1**

**Question Key Details :**

Key	Value
Comprehension	MCQ3

ಮೃದಂಗವು ಯಾವ ಮರದ ಕಟ್ಟಿಗೆಯಿಂದ ತಯಾರಿಸುತ್ತಾರೆಂದರೆ:

1. ಮಾವಿನ ಮರ
2. ಬೀಟೆ ಮರ
3. ನೇರಳೆ ಮರ
4. ಹಲಸಿನ ಮರ

**Options :**

485584134769. 1  
485584134770. 2  
485584134771. 3  
485584134772. 4

**Question Number : 379 Question Id : 48558433694 Question Type : MCQ Option Shuffling : No Is Question Mandatory : No Calculator : None Response Time : N.A Think Time : N.A Minimum Instruction Time : 0**

**Correct Marks : 5 Wrong Marks : 1**

**Question Key Details :**

Key	Value
Comprehension	MCQ3

How many 'Gullis' are used in Pakhawaj?

1. 6
2. 8
3. 10
4. 12

**Options :**

485584134773. 1  
485584134774. 2  
485584134775. 3  
485584134776. 4

**Question Number : 379 Question Id : 48558433694 Question Type : MCQ Option Shuffling : No Is Question Mandatory : No Calculator : None Response Time : N.A Think Time : N.A Minimum Instruction Time : 0**

**Correct Marks : 5 Wrong Marks : 1**

**Question Key Details :**

Key	Value
Comprehension	MCQ3

ಪಕ್ಕವಾದ್ಯದಲ್ಲಿ ಎಷ್ಟು ಕಮರಿಗಳಿರುತ್ತವೆ?

1. 6
2. 8
3. 10
4. 12

**Options :**

485584134773. 1  
485584134774. 2  
485584134775. 3  
485584134776. 4

**Question Number : 380 Question Id : 48558433695 Question Type : MCQ Option Shuffling : No Is Question Mandatory : No Calculator : None Response Time : N.A Think Time : N.A Minimum Instruction Time : 0**

**Correct Marks : 5 Wrong Marks : 1**

**Question Key Details :**

Key	Value
Comprehension	MCQ3

Kudau Singh is related to which musical instrument (Vadya)?

1. Tabla
2. Pakhawaj
3. Mridangam
4. Punga

**Options :**

485584134777. 1  
485584134778. 2  
485584134779. 3  
485584134780. 4

**Question Number : 380 Question Id : 48558433695 Question Type : MCQ Option Shuffling : No Is Question Mandatory : No Calculator : None Response Time : N.A Think Time : N.A Minimum Instruction Time : 0**

**Correct Marks : 5 Wrong Marks : 1**

**Question Key Details :**

Key	Value
Comprehension	MCQ3

ಕುಡೌ ಸಿಂಗರು ಯಾವ ಸಂಗೀತ ಸಾಧನಕ್ಕೆ (ವಾದ್ಯ) ಸಂಬಂಧಿಸಿದವರು?

1. ತಬಲ
2. ಪಕ್ಕವಾದ್ಯ
3. ಮೃದಂಗಮ್
4. ಪುಂಗಿ

**Options :**

485584134777. 1  
485584134778. 2  
485584134779. 3  
485584134780. 4

**Question Number : 381 Question Id : 48558433696 Question Type : MCQ Option Shuffling : No Is Question Mandatory : No Calculator : None Response Time : N.A Think Time : N.A Minimum Instruction Time : 0**

**Correct Marks : 5 Wrong Marks : 1**

**Question Key Details :**

Key	Value
Comprehension	MCQ3

Kayada of Ada laya is famous in which Gharana?

1. Delhi
2. Punjab
3. Ajrada
4. Farukhabad

**Options :**

485584134781. 1  
485584134782. 2  
485584134783. 3  
485584134784. 4

**Question Number : 381 Question Id : 48558433696 Question Type : MCQ Option Shuffling : No Is Question Mandatory : No Calculator : None Response Time : N.A Think Time : N.A Minimum Instruction Time : 0**

**Correct Marks : 5 Wrong Marks : 1**

**Question Key Details :**

Key	Value
Comprehension	MCQ3

ಆದಿ ಲಯದ ಕಯಾದವು ಯಾವ ಘರಾನಾದಲ್ಲಿ ಪ್ರಸಿದ್ಧಿಯಾಗಿದೆ?

1. ದೆಹಲಿ
2. ಪಂಜಾಬ್
3. ಆರ್ಜವ
4. ಫಾರುಖಾಬಾದ್

**Options :**

485584134781. 1  
485584134782. 2  
485584134783. 3  
485584134784. 4

**Question Number : 382 Question Id : 48558433697 Question Type : MCQ Option Shuffling : No Is Question Mandatory : No Calculator : None Response Time : N.A Think Time : N.A Minimum Instruction Time : 0**

**Correct Marks : 5 Wrong Marks : 1**

**Question Key Details :**

Key	Value
Comprehension	MCQ3

'Dha' Varna is related to which instrument (Vadya)?

1. Sitar
2. Sarod
3. Pakhawaj
4. Violin

**Options :**

485584134785. 1  
485584134786. 2  
485584134787. 3  
485584134788. 4

**Question Number : 382 Question Id : 48558433697 Question Type : MCQ Option Shuffling : No Is Question Mandatory : No Calculator : None Response Time : N.A Think Time : N.A Minimum Instruction Time : 0**

**Correct Marks : 5 Wrong Marks : 1**

**Question Key Details :**

Key	Value
Comprehension	MCQ3

"ಢ" ವರ್ಣವು ಯಾವ ಸಾಧನ (ವಾದ್ಯ)ಕ್ಕೆ ಸಂಬಂಧಿಸಿದೆ?

1. ಸಿತಾರ್
2. ಸರೋದ್
3. ಪಕ್ಕವಾದ್ಯ
4. ವಯೋಲಿನ್

**Options :**

485584134785. 1  
485584134786. 2  
485584134787. 3  
485584134788. 4

**Question Number : 383 Question Id : 48558433698 Question Type : MCQ Option Shuffling : No Is Question Mandatory : No Calculator : None Response Time : N.A Think Time : N.A Minimum Instruction Time : 0**

**Correct Marks : 5 Wrong Marks : 1**

**Question Key Details :**

Key	Value
Comprehension	MCQ3

Ta, Deem, Dom, Nam varnas pertain to which instrument (Vadya)?

1. Pakhawaj
2. Tabla
3. Dholak
4. Mridangam

**Options :**

485584134789. 1  
485584134790. 2  
485584134791. 3  
485584134792. 4

**Question Number : 383 Question Id : 48558433698 Question Type : MCQ Option Shuffling : No Is Question Mandatory : No Calculator : None Response Time : N.A Think Time : N.A Minimum Instruction Time : 0**

**Correct Marks : 5 Wrong Marks : 1**

**Question Key Details :**

Key	Value
Comprehension	MCQ3

ತಾ, ಧೀಮ್, ಧೋಮ್, ನಾಮ್ ವರ್ಣಗಳು ಯಾವ ಸಾಧನ (ವಾದ್ಯ)ಕ್ಕೆ ಸಂಬಂಧಿಸಿವೆ?

1. ಪಕ್ಕವಾದ್ಯ
2. ತಬಲ
3. ಧೋಲಕ್
4. ಮೃದಂಗಮ್

**Options :**

485584134789. 1  
485584134790. 2  
485584134791. 3  
485584134792. 4

**Question Number : 384 Question Id : 48558433699 Question Type : MCQ Option Shuffling : No Is Question Mandatory : No Calculator : None Response Time : N.A Think Time : N.A Minimum Instruction Time : 0**

**Correct Marks : 5 Wrong Marks : 1**

**Question Key Details :**

Key	Value
Comprehension	MCQ3

'Pharan' is played on:

1. Khol
2. Tabla
3. Pakhawaj
4. Mridangam

**Options :**

485584134793. 1  
485584134794. 2  
485584134795. 3  
485584134796. 4

**Question Number : 384 Question Id : 48558433699 Question Type : MCQ Option Shuffling : No Is Question Mandatory : No Calculator : None Response Time : N.A Think Time : N.A Minimum Instruction Time : 0**

**Correct Marks : 5 Wrong Marks : 1**

**Question Key Details :**

Key	Value
Comprehension	MCQ3

"ಫರಣ"ವು ನುಡಿಸುವುದು ಇದರ ಮೇಲೆ:

1. ಖೋಲ್
2. ತಬಲ
3. ಪಕ್ಕವಾದ್ಯ
4. ಮೃದಂಗಮ್

**Options :**

485584134793. 1  
485584134794. 2  
485584134795. 3  
485584134796. 4

**Question Number : 385 Question Id : 48558433700 Question Type : MCQ Option Shuffling : No Is Question Mandatory : No Calculator : None Response Time : N.A Think Time : N.A Minimum Instruction Time : 0**

**Correct Marks : 5 Wrong Marks : 1**

**Question Key Details :**

Key	Value
Comprehension	MCQ3

Matras are indicated by the sign -

1. X X X
2. # # #
3. 1 2 3
4. 1 1 1

**Options :**

485584134797. 1  
485584134798. 2  
485584134799. 3  
485584134800. 4

**Question Number : 385 Question Id : 48558433700 Question Type : MCQ Option Shuffling : No Is Question Mandatory : No Calculator : None Response Time : N.A Think Time : N.A Minimum Instruction Time : 0**

**Correct Marks : 5 Wrong Marks : 1**

**Question Key Details :**

Key	Value
Comprehension	MCQ3

ಮಾತ್ರಗಳನ್ನು ತೋರಿಸುವುದು ಈ ಸಂಕೇತದಿಂದ -

1. X X X
2. # # #
3. 1 2 3
4. 1 1 1

**Options :**

485584134797. 1  
485584134798. 2  
485584134799. 3  
485584134800. 4

**Question Number : 386 Question Id : 48558433701 Question Type : MCQ Option Shuffling : No Is Question Mandatory : No Calculator : None Response Time : N.A Think Time : N.A Minimum Instruction Time : 0**

**Correct Marks : 5 Wrong Marks : 1**

**Question Key Details :**

Key	Value
Comprehension	MCQ3



Earmark the laya 'Thah':

1. 1 2 3 4

2. 12 34 56 78

3. 123 456 789 10,11,12

4. 1234 1234 1234 1234

**Options :**

485584134801. 1

485584134802. 2

485584134803. 3

485584134804. 4

**Question Number : 386 Question Id : 48558433701 Question Type : MCQ Option Shuffling : No Is Question Mandatory : No Calculator : None Response Time : N.A Think Time : N.A Minimum Instruction Time : 0**

**Correct Marks : 5 Wrong Marks : 1**

**Question Key Details :**

Key	Value
Comprehension	MCQ3

ಲಯ 'ಥಾ' ಗುರುತಿಸುವುದು:

1. 1 2 3 4

2. 12 34 56 78

3. 123 456 789 10,11,12

4. 1234 1234 1234 1234

**Options :**

485584134801. 1

485584134802. 2

485584134803. 3

485584134804. 4

**Question Number : 387 Question Id : 48558433702 Question Type : MCQ Option Shuffling : No Is Question Mandatory : No Calculator : None Response Time : N.A Think Time : N.A Minimum Instruction Time : 0**

**Correct Marks : 5 Wrong Marks : 1**

**Question Key Details :**

Key	Value
Comprehension	MCQ3

Syahi (ink) appearing in the Mridangam bears the color:

1. Green
2. Red
3. Black
4. Yellow

**Options :**

485584134805. 1  
485584134806. 2  
485584134807. 3  
485584134808. 4

**Question Number : 387 Question Id : 48558433702 Question Type : MCQ Option Shuffling : No Is Question Mandatory : No Calculator : None Response Time : N.A Think Time : N.A Minimum Instruction Time : 0**

**Correct Marks : 5 Wrong Marks : 1**

**Question Key Details :**

Key	Value
Comprehension	MCQ3

ಮೃದಂಗದಲ್ಲಿ ಕಾಣುವ ಶಾಯಿ (ink) ಹೊಂದಿರುವ ಬಣ್ಣ:

1. ಹಸಿರು
2. ಕೆಂಪು
3. ಕಪ್ಪು
4. ಹಳದಿ

**Options :**

485584134805. 1  
485584134806. 2  
485584134807. 3  
485584134808. 4

**Question Number : 388 Question Id : 48558433703 Question Type : MCQ Option Shuffling : No Is Question Mandatory : No Calculator : None Response Time : N.A Think Time : N.A Minimum Instruction Time : 0**

**Correct Marks : 5 Wrong Marks : 1**

**Question Key Details :**

Key	Value
Comprehension	MCQ3

Identify the Tala:

Ka, dhe, Te, Dhe Te dhaa S .....

1. Teentala
2. Chartala
3. Dhamar
4. Jhampatala

**Options :**

485584134809. 1  
485584134810. 2  
485584134811. 3  
485584134812. 4

**Question Number : 388 Question Id : 48558433703 Question Type : MCQ Option Shuffling : No Is Question Mandatory : No Calculator : None Response Time : N.A Think Time : N.A Minimum Instruction Time : 0**

**Correct Marks : 5 Wrong Marks : 1**

**Question Key Details :**

Key	Value
Comprehension	MCQ3

ಕಾ, ಧೇ, ತೇ, ಧೇ ತೇ ಧಾ ಸಾ ... ದಲ್ಲಿನ ತಾಳವನ್ನು ಗುರುತಿಸಿ:

1. ತೀನ್‌ತಾಳ
2. ಚೌರ್ ತಾಳ
3. ಧಮಾರ್
4. ಝಂಪ ತಾಳ

**Options :**

485584134809. 1  
485584134810. 2  
485584134811. 3  
485584134812. 4

**Question Number : 389 Question Id : 48558433704 Question Type : MCQ Option Shuffling : No Is Question Mandatory : No Calculator : None Response Time : N.A Think Time : N.A Minimum Instruction Time : 0**

**Correct Marks : 5 Wrong Marks : 1**

**Question Key Details :**

Key	Value
Comprehension	MCQ3

'Baddhi' of Tabla is made up of:

1. String
2. Leather
3. Metal
4. Iron

**Options :**

485584134813. 1  
485584134814. 2  
485584134815. 3  
485584134816. 4

**Question Number : 389 Question Id : 48558433704 Question Type : MCQ Option Shuffling : No Is Question Mandatory : No Calculator : None Response Time : N.A Think Time : N.A Minimum Instruction Time : 0**

**Correct Marks : 5 Wrong Marks : 1**

**Question Key Details :**

Key	Value
Comprehension	MCQ3

ತಬಲದ "ಬದ್ಧಿ"ಯು ಮಾಡಲ್ಪಟ್ಟಿರುವುದು ಇದರಿಂದ:

1. ತಂತಿ
2. ಚರ್ಮ/ತೋಗಲು
3. ಲೋಹ
4. ಕಬ್ಬಿಣ

**Options :**

485584134813. 1  
485584134814. 2  
485584134815. 3  
485584134816. 4

**Question Number : 390 Question Id : 48558433705 Question Type : MCQ Option Shuffling : No Is Question Mandatory : No Calculator : None Response Time : N.A Think Time : N.A Minimum Instruction Time : 0**

**Correct Marks : 5 Wrong Marks : 1**

**Question Key Details :**

Key	Value
Comprehension	MCQ3

Match List I with List II

LIST I		LIST II	
Revelations (Bal)		Tala	
A.	Dhi Na Dhi Dhi Na	I.	Teental
B.	Dha Dhin Dhin Dha	II.	Jhaptal
C.	Ti Ti Na	III.	Dadra
D.	Dha Dhi Na	IV.	Rupak

Choose the correct answer from the options given below:

1. A-I, B-III, C-II, D-IV
2. A-III, B-II, C-I, D-IV
3. A-IV, B-III, C-II, D-I
4. A-II, B-I, C-IV, D-III

**Options :**

485584134817. 1  
485584134818. 2  
485584134819. 3  
485584134820. 4

**Question Number : 390 Question Id : 48558433705 Question Type : MCQ Option Shuffling : No Is Question Mandatory : No Calculator : None Response Time : N.A Think Time : N.A Minimum Instruction Time : 0**

**Correct Marks : 5 Wrong Marks : 1**

**Question Key Details :**

Key	Value
Comprehension	MCQ3

ಪಟ್ಟಿ - I ಅನ್ನು ಪಟ್ಟಿ - II ರ ಜೊತೆ ಹೊಂದಿಸಿ:

ಪಟ್ಟಿ - I ಪ್ರಕಟಿಸುವಿಕೆಗಳು (ಬಲ)		ಪಟ್ಟಿ - II ತಾಳ	
A.	ಧೀ ನಾ ಧೀ ಧೀ ನಾ	I.	ತೀನ್‌ತಾಳ
B.	ಧಾ ಧನ್ ಧನ್ ಧಾ	II.	ಝಪ್ ತಾಳ
C.	ತೀ ತೀ ನಾ	III.	ದಾದ್ರ
D.	ಧಾ ಧೀ ನಾ	IV.	ರೂಪಕ್

ಈ ಕೆಳಗಿನ ಆಯ್ಕೆಗಳಿಂದ ಸರಿಯಾದ ಉತ್ತರವನ್ನು ಆರಿಸಿ:

1. A-I, B-III, C-II, D-IV
2. A-III, B-II, C-I, D-IV
3. A-IV, B-III, C-II, D-I
4. A-II, B-I, C-IV, D-III

**Options :**

485584134817. 1

485584134818. 2  
485584134819. 3  
485584134820. 4

**Question Number : 391 Question Id : 48558433706 Question Type : MCQ Option Shuffling : No Is Question Mandatory : No Calculator : None Response Time : N.A Think Time : N.A Minimum Instruction Time : 0**

**Correct Marks : 5 Wrong Marks : 1**

**Question Key Details :**

Key	Value
Comprehension	MCQ3

Match List I with List II

LIST I		LIST II	
Bandish		(Instruments) Vadya	
A.	Kayada	I.	Pakhawaj
B.	Stuti Paran	II.	Sitar
C.	Razakhani Gat	III.	Tabla
D.	Aamad	IV.	Kathak

Choose the correct answer from the options given below:

1. A-III, B-I, C-II, D-IV
2. A-II, B-III, C-IV, D-I
3. A-I, B-II, C-III, D-IV
4. A-IV, B-III, C-I, D-II

**Options :**

485584134821. 1  
485584134822. 2  
485584134823. 3  
485584134824. 4

**Question Number : 391 Question Id : 48558433706 Question Type : MCQ Option Shuffling : No Is Question Mandatory : No Calculator : None Response Time : N.A Think Time : N.A Minimum Instruction Time : 0**

**Correct Marks : 5 Wrong Marks : 1**

**Question Key Details :**

Key	Value
Comprehension	MCQ3

ಪಟ್ಟಿ - I ಅನ್ನು ಪಟ್ಟಿ - II ರೊಂದಿಗೆ ಹೊಂದಿಸಿ:

ಪಟ್ಟಿ - I ಬಂದಿಪಾ	ಪಟ್ಟಿ - II (ಸಾಧನಗಳು) ವಾದ್ಯ
A. ಕಾಯದಾ	I. ಪಕ್ಕವಾದ್ಯ
B. ಸ್ತುತಿಪರಣ	II. ಸಿತಾರ್
C. ರಾಯಬಾನಿ ಘಟ	III. ತಬಲಾ
D. ಆಮದ್	IV. ಕಥಕ್

ಈ ಕೆಳಗಿನ ಆಯ್ಕೆಗಳಿಂದ ಸರಿಯಾದ ಉತ್ತರವನ್ನು ಆರಿಸಿ:

1. A-III, B-I, C-II, D-IV
2. A-II, B-III, C-IV, D-I
3. A-I, B-II, C-III, D-IV
4. A-IV, B-III, C-I, D-II

**Options :**

485584134821. 1  
485584134822. 2  
485584134823. 3  
485584134824. 4

**Question Number : 392 Question Id : 48558433707 Question Type : MCQ Option Shuffling : No Is Question Mandatory : No Calculator : None Response Time : N.A Think Time : N.A Minimum Instruction Time : 0**

**Correct Marks : 5 Wrong Marks : 1**

**Question Key Details :**

Key	Value
Comprehension	MCQ3

Which among the following are played on Pakhawaj?

- A. Stuti Paran
- B. Tukda
- C. Rela
- D. Kayada
- E. Chakradar

Choose the correct answer from the options given below:

1. A, C and E
2. A, B and D
3. A, D and E
4. A, B and C

**Options :**

485584134825. 1  
485584134826. 2

485584134827. 3

485584134828. 4

**Question Number : 392 Question Id : 48558433707 Question Type : MCQ Option Shuffling : No Is Question Mandatory : No Calculator : None Response Time : N.A Think Time : N.A Minimum Instruction Time : 0**

**Correct Marks : 5 Wrong Marks : 1**

**Question Key Details :**

Key	Value
Comprehension	MCQ3

ಕೆಳಗಿನವುಗಳಲ್ಲಿ ಯಾವುದನ್ನು ಪಕ್ಕವಾದ್ಯದಲ್ಲಿ ನುಡಿಸುತ್ತಾರೆ?

- A. ಸ್ತುತಿ ಪರಣ
- B. ತುಕ್ಕ
- C. ರೆಲಾ
- D. ಕಾಯದಾ
- E. ಚಕ್ರಧಾರ

ಈ ಕೆಳಗಿನ ಆಯ್ಕೆಗಳಿಂದ ಸರಿಯಾದ ಉತ್ತರವನ್ನು ಆರಿಸಿ:

- 1. A, C ಮತ್ತು E
- 2. A, B ಮತ್ತು D
- 3. A, D ಮತ್ತು E
- 4. A, B ಮತ್ತು C

**Options :**

485584134825. 1

485584134826. 2

485584134827. 3

485584134828. 4

**Question Number : 393 Question Id : 48558433708 Question Type : MCQ Option Shuffling : No Is Question Mandatory : No Calculator : None Response Time : N.A Think Time : N.A Minimum Instruction Time : 0**

**Correct Marks : 5 Wrong Marks : 1**

**Question Key Details :**

Key	Value
Comprehension	MCQ3



Select correct sequence of Tabla Players on the basis of their seniority.

- A. Kishan Maharaj
- B. Zakir Hussain
- C. Chotey Lal Mishra
- D. Ramji Mishra
- E. Ram Kumar Mishra

Choose the correct answer from the options given below:

- 1. A, C, D, B, E
- 2. A, B, C, D, E
- 3. A, D, E, C, B
- 4. A, E, D, C, B

**Options :**

- 485584134829. 1
- 485584134830. 2
- 485584134831. 3
- 485584134832. 4

**Question Number : 393 Question Id : 48558433708 Question Type : MCQ Option Shuffling : No Is Question Mandatory : No Calculator : None Response Time : N.A Think Time : N.A Minimum Instruction Time : 0**

**Correct Marks : 5 Wrong Marks : 1**

**Question Key Details :**

Key	Value
Comprehension	MCQ3

ತಬಲಗಾರರ ಹಿರಿತನದ ಆಧಾರದ ಮೇಲೆ ಸರಿಯಾದ ಅನುಕ್ರಮಣಿಕೆಯನ್ನು ಆಯ್ಕೆ ಮಾಡಿ.

- A. ಕಿಶನ್ ಮಹಾರಾಜ್
- B. ಝಾಕಿರ್ ಹುಸೇನ್
- C. ಛೋಟೇಲಾಲ್ ಮಿಶ್ರ
- D. ರಾಮಜಿ ಮಿಶ್ರ
- E. ರಾಮಕುಮಾರ್ ಮಿಶ್ರ

ಈ ಕೆಳಗಿನ ಆಯ್ಕೆಗಳಿಂದ ಸರಿಯಾದ ಉತ್ತರವನ್ನು ಆರಿಸಿ:

- 1. A, C, D, B, E
- 2. A, B, C, D, E
- 3. A, D, E, C, B
- 4. A, E, D, C, B

**Options :**

- 485584134829. 1
- 485584134830. 2
- 485584134831. 3
- 485584134832. 4

**Question Number : 394 Question Id : 48558433709 Question Type : MCQ Option Shuffling : No Is Question Mandatory : No Calculator : None Response Time : N.A Think Time : N.A Minimum Instruction Time : 0**

**Correct Marks : 5 Wrong Marks : 1**

**Question Key Details :**

Key	Value
Comprehension	MCQ3

Which instruments (Vadya) are played during 'Bhajan' singing?

- A. Tabla
- B. Surbahar
- C. Pakhawaj
- D. Drum
- E. Harmonium

Choose the correct answer from the options given below:

- 1. A, B and C
- 2. A, C and E
- 3. A, D and B
- 4. B, D and E

**Options :**

- 485584134833. 1
- 485584134834. 2
- 485584134835. 3
- 485584134836. 4

**Question Number : 394 Question Id : 48558433709 Question Type : MCQ Option Shuffling : No Is Question Mandatory : No Calculator : None Response Time : N.A Think Time : N.A Minimum Instruction Time : 0**

**Correct Marks : 5 Wrong Marks : 1**

**Question Key Details :**

Key	Value
Comprehension	MCQ3

"ಭಜನೆ" ಮಾಡುವಾಗ ಯಾವ ಸಾಧನ (ವಾದ್ಯ)ವನ್ನು ನುಡಿಸುತ್ತಾರೆ?

- A. ತಬಲ
- B. ಸುರಬಹಾರ್
- C. ಪಕ್ಕವಾದ್ಯ
- D. ಡ್ರಮ್
- E. ಹಾರ್ಮೋನಿಯಂ

ಈ ಕೆಳಗಿನ ಆಯ್ಕೆಗಳಿಂದ ಸರಿಯಾದ ಉತ್ತರವನ್ನು ಆರಿಸಿ:

- 1. A, B ಮತ್ತು C
- 2. A, C ಮತ್ತು E
- 3. A, D ಮತ್ತು B
- 4. B, D ಮತ್ತು E

**Options :**

- 485584134833. 1
- 485584134834. 2
- 485584134835. 3
- 485584134836. 4

**Question Number : 395 Question Id : 48558433710 Question Type : MCQ Option Shuffling : No Is Question Mandatory : No Calculator : None Response Time : N.A Think Time : N.A Minimum Instruction Time : 0**

**Correct Marks : 5 Wrong Marks : 1**

**Question Key Details :**

Key	Value
Comprehension	MCQ3

Which of the following are Tabla Gharanas?

- A. Delhi
- B. Culcutta
- C. Ajrada
- D. Jaipur
- E. Farukhabad

Choose the correct answer from the options given below:

- 1. A, B and D
- 2. A, D and E
- 3. A, C and E
- 4. A, E and C

**Options :**

- 485584134837. 1
- 485584134838. 2
- 485584134839. 3
- 485584134840. 4

Question Number : 395 Question Id : 48558433710 Question Type : MCQ Option Shuffling : No Is Question Mandatory : No Calculator : None Response Time : N.A Think Time : N.A Minimum Instruction Time : 0  
Correct Marks : 5 Wrong Marks : 1  
Question Key Details :

Key	Value
Comprehension	MCQ3

ಕೆಳಗಿನವುಗಳಲ್ಲಿ ಯಾವುದು ತಬಲಾ ಘರಾನಗಳು?

- A. ದೆಹಲಿ
- B. ಕಲ್ಕತ್ತ
- C. ಅರ್ಜುನ್
- D. ಜೈಪುರ
- E. ಫಾರುಖಬಾದ್

ಈ ಕೆಳಗಿನ ಆಯ್ಕೆಗಳಿಂದ ಸರಿಯಾದ ಉತ್ತರವನ್ನು ಆರಿಸಿ:

- 1. A, B ಮತ್ತು D
- 2. A, D ಮತ್ತು E
- 3. A, C ಮತ್ತು E
- 4. A, E ಮತ್ತು C

Options :

- 485584134837. 1
- 485584134838. 2
- 485584134839. 3
- 485584134840. 4

## Drama And Theatre

Section Id :	485584866
Section Number :	5
Section type :	Online
Mandatory or Optional :	Optional
Number of Questions :	25
Number of Questions to be attempted :	20
Section Marks :	100
Enable Mark as Answered Mark for Review and Clear Response :	Yes
Maximum Instruction Time :	0
Sub-Section Number :	1
Sub-Section Id :	4855842441
Question Shuffling Allowed :	Yes
Is Section Default? :	null

Question Number : 396 Question Id : 48558433711 Question Type : MCQ Option Shuffling : No Is Question Mandatory : No Calculator : None Response Time : N.A Think Time : N.A Minimum Instruction Time : 0  
Correct Marks : 5 Wrong Marks : 1  
Question Key Details :

Key	Value
Comprehension	MCQ4

In which sanskrit drama of Bhasa the curse of Parshurama plays an important role?

1. Madhyama Vyayoga
2. Karnabharam
3. Urubhangam
4. Dutavakyam

**Options :**

485584134841. 1  
485584134842. 2  
485584134843. 3  
485584134844. 4

**Question Number : 396 Question Id : 48558433711 Question Type : MCQ Option Shuffling : No Is Question Mandatory : No Calculator : None Response Time : N.A Think Time : N.A Minimum Instruction Time : 0**

**Correct Marks : 5 Wrong Marks : 1**

**Question Key Details :**

Key	Value
Comprehension	MCQ4

ಭಾಸನ ಯಾವ ಸಂಸ್ಕೃತ ನಾಟಕದಲ್ಲಿ ಪರಶುರಾಮ ಶಾಪವು ಮುಖ್ಯ ಪಾತ್ರ ವಹಿಸುತ್ತದೆ?

1. ಮಧ್ಯಮ ವ್ಯಾಯೋಗ
2. ಕರ್ಣಾಭರಣಂ
3. ಊರುಭಂಗಂ
4. ದೂತವಾಕ್ಯಂ

**Options :**

485584134841. 1  
485584134842. 2  
485584134843. 3  
485584134844. 4

**Question Number : 397 Question Id : 48558433712 Question Type : MCQ Option Shuffling : No Is Question Mandatory : No Calculator : None Response Time : N.A Think Time : N.A Minimum Instruction Time : 0**

**Correct Marks : 5 Wrong Marks : 1**

**Question Key Details :**

Key	Value
Comprehension	MCQ4

In which sanskrit drama Charudatta and Vasantsena appears as Nayaka and Nayika?

1. Svapna Vasavadattam
2. Mahaveer Charitam
3. Mricchakatikam
4. Abhijnanshakuntalam

**Options :**

485584134845. 1  
485584134846. 2  
485584134847. 3  
485584134848. 4

**Question Number : 397 Question Id : 48558433712 Question Type : MCQ Option Shuffling : No Is Question Mandatory : No Calculator : None Response Time : N.A Think Time : N.A Minimum Instruction Time : 0**

**Correct Marks : 5 Wrong Marks : 1**

**Question Key Details :**

Key	Value
Comprehension	MCQ4

ಯಾವ ಸಂಸ್ಕೃತ ನಾಟಕದಲ್ಲಿ ಚಾರುದತ್ತ ಮತ್ತು ವಸಂತಸೇನರು ನಾಯಕ ಮತ್ತು ನಾಯಕಿಯಾಗಿ ಕಾಣಿಸುತ್ತಾರೆ?

1. ಸ್ವಪ್ನ ವಾಸವದತ್ತಮ್
2. ಮಹಾವೀರ ಚರಿತಂ
3. ಮೃಚ್ಛಕಟಿಕಂ
4. ಅಭಿಜ್ಞಾನ ಶಾಕುಂತಲಂ

**Options :**

485584134845. 1  
485584134846. 2  
485584134847. 3  
485584134848. 4

**Question Number : 398 Question Id : 48558433713 Question Type : MCQ Option Shuffling : No Is Question Mandatory : No Calculator : None Response Time : N.A Think Time : N.A Minimum Instruction Time : 0**

**Correct Marks : 5 Wrong Marks : 1**

**Question Key Details :**

Key	Value
Comprehension	MCQ4

The traditional Theatre Form created by the great religious thinker and reformer Shankardeva of Assam is known as:

1. Ankia Nat
2. Rasaleela
3. Krishnattam
4. Chhau

**Options :**

485584134849. 1  
485584134850. 2  
485584134851. 3  
485584134852. 4

**Question Number : 398 Question Id : 48558433713 Question Type : MCQ Option Shuffling : No Is Question Mandatory : No Calculator : None Response Time : N.A Think Time : N.A Minimum Instruction Time : 0**

**Correct Marks : 5 Wrong Marks : 1**

**Question Key Details :**

Key	Value
Comprehension	MCQ4

ಪ್ರಸಿದ್ಧ ಧಾರ್ಮಿಕ ಚಿಂತಕರು ಮತ್ತು ಸುಧಾರಣಾವಾದಿಗಳಾದ ಆಸ್ವಾನ ಶಂಕರದೇವರು ರಚಿಸಿದ ಸಾಂಪ್ರದಾಯಿಕ ರಂಗಭೂಮಿ ರೂಪವನ್ನು ಏನೆನ್ನುತ್ತಾರೆ ಎಂದರೆ,

1. ಆಂಕಿಯ ನಾಟ್
2. ರಾಸಲೀಲಾ
3. ಕೃಷ್ಣಟ್ಟಿಮ್
4. ಚೌ

**Options :**

485584134849. 1  
485584134850. 2  
485584134851. 3  
485584134852. 4

**Question Number : 399 Question Id : 48558433714 Question Type : MCQ Option Shuffling : No Is Question Mandatory : No Calculator : None Response Time : N.A Think Time : N.A Minimum Instruction Time : 0**

**Correct Marks : 5 Wrong Marks : 1**

**Question Key Details :**

Key	Value
Comprehension	MCQ4

'Jokumarswami', the famous Kannada play is written by -

1. Girish Karnad
2. Adya Rangacharya
3. Chandrasekhar Kambar
4. H. S. Shivaprakash

**Options :**

485584134853. 1  
485584134854. 2  
485584134855. 3  
485584134856. 4

**Question Number : 399 Question Id : 48558433714 Question Type : MCQ Option Shuffling : No Is Question Mandatory : No Calculator : None Response Time : N.A Think Time : N.A Minimum Instruction Time : 0**

**Correct Marks : 5 Wrong Marks : 1**

**Question Key Details :**

Key	Value
Comprehension	MCQ4

ಪ್ರಸಿದ್ಧ ಕನ್ನಡ ನಾಟಕ 'ಜೋಕುಮಾರಸ್ವಾಮಿ' ಬರೆಯಲ್ಪಟ್ಟಿದ್ದು ಇವರಿಂದ:

1. ಗಿರೀಶ್ ಕಾರ್ನಾಡ್
2. ಆದ್ಯ ರಂಗಾಚಾರ್ಯ
3. ಚಂದ್ರಶೇಖರ ಕಂಬಾರ
4. ಎಚ್.ಎಸ್. ಶಿವಪ್ರಕಾಶ್

**Options :**

485584134853. 1  
485584134854. 2  
485584134855. 3  
485584134856. 4

**Question Number : 400 Question Id : 48558433715 Question Type : MCQ Option Shuffling : No Is Question Mandatory : No Calculator : None Response Time : N.A Think Time : N.A Minimum Instruction Time : 0**

**Correct Marks : 5 Wrong Marks : 1**

**Question Key Details :**

Key	Value
Comprehension	MCQ4



The famous Hindi play 'Adhe Adhure' which depicts the crisis of values faced by the middle class family, is written by:

1. Mohan Rakesh
2. Surendra Varma
3. Shankar Shesh
4. Mani Madhukar

**Options :**

485584134857. 1  
485584134858. 2  
485584134859. 3  
485584134860. 4

**Question Number : 400 Question Id : 48558433715 Question Type : MCQ Option Shuffling : No Is Question Mandatory : No Calculator : None Response Time : N.A Think Time : N.A Minimum Instruction Time : 0**

**Correct Marks : 5 Wrong Marks : 1**

**Question Key Details :**

Key	Value
Comprehension	MCQ4

ಮಧ್ಯಮ ಕುಟುಂಬ ಎದುರಿಸುವ ಮೌಲ್ಯಗಳ ಬಿಕ್ಕಟ್ಟನ್ನು ತೋರಿಸುವ ಪ್ರಸಿದ್ಧ ಹಿಂದಿ ನಾಟಕ "ಆಧೇ ಅಧೂರೇ"ಯು ಬರೆಯಲ್ಪಟ್ಟಿದ್ದು ಇವರಿಂದ:

1. ಮೋಹನ್ ರಾಕೇಶ್
2. ಸುರೇಂದ್ರ ವರ್ಮಾ
3. ಶಂಕರ್ ಶೇಷ್
4. ಮಣಿ ಮಧುಕರ್

**Options :**

485584134857. 1  
485584134858. 2  
485584134859. 3  
485584134860. 4

**Question Number : 401 Question Id : 48558433716 Question Type : MCQ Option Shuffling : No Is Question Mandatory : No Calculator : None Response Time : N.A Think Time : N.A Minimum Instruction Time : 0**

**Correct Marks : 5 Wrong Marks : 1**

**Question Key Details :**

Key	Value
Comprehension	MCQ4

The Director who is famous for directing Mahakavi Bhasa plays :

1. Jabbar Patel
2. K. N. Pannikar
3. Pravin Joshi
4. Rajendar Nath

**Options :**

485584134861. 1  
485584134862. 2  
485584134863. 3  
485584134864. 4

**Question Number : 401 Question Id : 48558433716 Question Type : MCQ Option Shuffling : No Is Question Mandatory : No Calculator : None Response Time : N.A Think Time : N.A Minimum Instruction Time : 0**

**Correct Marks : 5 Wrong Marks : 1**

**Question Key Details :**

Key	Value
Comprehension	MCQ4

ಮಹಾಕವಿ ಭಾಸನ ನಾಟಕಗಳನ್ನು ನಿರ್ದೇಶಿಸಿದ್ದ ಪ್ರಸಿದ್ಧ ನಿರ್ದೇಶಕರು:

1. ಜಬ್ಬಾರ್ ಪಟೇಲ್
2. ಕೆ.ಎನ್. ಪಣಿಕ್ಕರ್
3. ಪ್ರವೀಣ್ ಜೋಶಿ
4. ರಾಜೇಂದ್ರ ನಾಥ್

**Options :**

485584134861. 1  
485584134862. 2  
485584134863. 3  
485584134864. 4

**Question Number : 402 Question Id : 48558433717 Question Type : MCQ Option Shuffling : No Is Question Mandatory : No Calculator : None Response Time : N.A Think Time : N.A Minimum Instruction Time : 0**

**Correct Marks : 5 Wrong Marks : 1**

**Question Key Details :**

Key	Value
Comprehension	MCQ4

'Hypokrites' is a Greek word meaning:

1. Actor
2. Director
3. Producer
4. Playwright

**Options :**

485584134865. 1  
485584134866. 2  
485584134867. 3  
485584134868. 4

**Question Number : 402 Question Id : 48558433717 Question Type : MCQ Option Shuffling : No Is Question Mandatory : No Calculator : None Response Time : N.A Think Time : N.A Minimum Instruction Time : 0**

**Correct Marks : 5 Wrong Marks : 1**

**Question Key Details :**

Key	Value
Comprehension	MCQ4

"ಹಿಪೋಕ್ರೈಟ್ಸ್" ಎನ್ನುವುದು ಒಂದು ಗ್ರೀಕ್ ಪದ. ಇದರರ್ಥವು:

1. ನಟ
2. ನಿರ್ದೇಶಕ
3. ನಿರ್ಮಾಪಕ
4. ನಾಟಕ ರಚನಾಕಾರ

**Options :**

485584134865. 1  
485584134866. 2  
485584134867. 3  
485584134868. 4

**Question Number : 403 Question Id : 48558433718 Question Type : MCQ Option Shuffling : No Is Question Mandatory : No Calculator : None Response Time : N.A Think Time : N.A Minimum Instruction Time : 0**

**Correct Marks : 5 Wrong Marks : 1**

**Question Key Details :**

Key	Value
Comprehension	MCQ4

The only surviving Greek Trilogy is 'Aeschylus' -

1. The Persians
2. The Orestia
3. Agamemnon
4. The Eumenides

**Options :**

485584134869. 1  
485584134870. 2  
485584134871. 3  
485584134872. 4

**Question Number : 403 Question Id : 48558433718 Question Type : MCQ Option Shuffling : No Is Question Mandatory : No Calculator : None Response Time : N.A Think Time : N.A Minimum Instruction Time : 0**

**Correct Marks : 5 Wrong Marks : 1**

**Question Key Details :**

Key	Value
Comprehension	MCQ4

"ಎಸ್ಕೆಲಸ್"ಯು ಒಂದೇ ಒಂದು ಉಳಿದಿರುವ ಗ್ರೀಕ್ ನ ತ್ರಿನಾಟಕ (Trilogy) -

1. ಪರ್ಷಿಯನ್ನರು
2. ಒರೇಸ್ಟಿಯಾ
3. ಆಗಮೆಮ್ನಾನ್
4. ಯೂಮೆನಿಡರು

**Options :**

485584134869. 1  
485584134870. 2  
485584134871. 3  
485584134872. 4

**Question Number : 404 Question Id : 48558433719 Question Type : MCQ Option Shuffling : No Is Question Mandatory : No Calculator : None Response Time : N.A Think Time : N.A Minimum Instruction Time : 0**

**Correct Marks : 5 Wrong Marks : 1**

**Question Key Details :**

Key	Value
Comprehension	MCQ4

Who among the following is NOT an acclaimed Shakespearean actor?

1. Charles Kean
2. Henry Irving
3. James Burbage
4. Laurence Olivier

**Options :**

485584134873. 1  
485584134874. 2  
485584134875. 3  
485584134876. 4

**Question Number : 404 Question Id : 48558433719 Question Type : MCQ Option Shuffling : No Is Question Mandatory : No Calculator : None Response Time : N.A Think Time : N.A Minimum Instruction Time : 0**

**Correct Marks : 5 Wrong Marks : 1**

**Question Key Details :**

Key	Value
Comprehension	MCQ4

ಕೆಳಗಿನವರುಗಳಲ್ಲಿ ಯಾರು ಪ್ರಖ್ಯಾತ ಶೇಕ್ಸ್‌ಪಿಯರ್‌ನ ನಟರಲ್ಲ?

1. ಚಾರ್ಲ್ಸ್ ಕೀನ್
2. ಹೆನ್ರಿ ಇರ್ವಿಂಗ್
3. ಜೇಮ್ಸ್ ಬುರ್ಬೇಜ್
4. ಲಾರೆನ್ಸ್ ಒಲಿವಿಯರ್

**Options :**

485584134873. 1  
485584134874. 2  
485584134875. 3  
485584134876. 4

**Question Number : 405 Question Id : 48558433720 Question Type : MCQ Option Shuffling : No Is Question Mandatory : No Calculator : None Response Time : N.A Think Time : N.A Minimum Instruction Time : 0**

**Correct Marks : 5 Wrong Marks : 1**

**Question Key Details :**

Key	Value
Comprehension	MCQ4

Which among the following plays is written by Anton Chekhov?

1. The Lower Depths
2. The Lesson
3. The Seagull
4. The Weavers

**Options :**

485584134877. 1  
485584134878. 2  
485584134879. 3  
485584134880. 4

**Question Number : 405 Question Id : 48558433720 Question Type : MCQ Option Shuffling : No Is Question Mandatory : No Calculator : None Response Time : N.A Think Time : N.A Minimum Instruction Time : 0**

**Correct Marks : 5 Wrong Marks : 1**

**Question Key Details :**

Key	Value
Comprehension	MCQ4

ಕೆಳಗಿನವುಗಳಲ್ಲಿ ಯಾವುದು ಆಂಟೋನ್ ಚೆಖೋವ್ ಬರೆದ ನಾಟಕ?

1. ದಿ ಲೋವರ್ ಡೆಪ್ತ್ಸ್
2. ದಿ ಲೆಸ್ಸನ್
3. ದಿ ಸೀಗಲ್
4. ದಿ ವೀವರ್ಸ್

**Options :**

485584134877. 1  
485584134878. 2  
485584134879. 3  
485584134880. 4

**Question Number : 406 Question Id : 48558433721 Question Type : MCQ Option Shuffling : No Is Question Mandatory : No Calculator : None Response Time : N.A Think Time : N.A Minimum Instruction Time : 0**

**Correct Marks : 5 Wrong Marks : 1**

**Question Key Details :**

Key	Value
Comprehension	MCQ4

Which among the following plays is NOT written by Samuel Beckett?

1. Waiting for Godot
2. Happy days
3. The Birthday Party
4. Endgame

**Options :**

485584134881. 1  
485584134882. 2  
485584134883. 3  
485584134884. 4

**Question Number : 406 Question Id : 48558433721 Question Type : MCQ Option Shuffling : No Is Question Mandatory : No Calculator : None Response Time : N.A Think Time : N.A Minimum Instruction Time : 0**

**Correct Marks : 5 Wrong Marks : 1**

**Question Key Details :**

Key	Value
Comprehension	MCQ4

ಕೆಳಗಿನ ನಾಟಕಗಳಲ್ಲಿ ಯಾವುದು ಸ್ಯಾಮುಯೆಲ್ ಬೆಕೆಟ್‌ರಿಂದ ಬರೆಯಲ್ಪಟ್ಟಿಲ್ಲ?

1. ವೈಟಿಂಗ್ ಫಾರ್ ಗೋಡೋಟ್
2. ಹ್ಯಾಪಿ ಡೇಸ್
3. ದಿ ಬರ್ತ್‌ಡೇ ಪಾರ್ಟಿ
4. ಎಂಡ್‌ಗೆಮ್

**Options :**

485584134881. 1  
485584134882. 2  
485584134883. 3  
485584134884. 4

**Question Number : 407 Question Id : 48558433722 Question Type : MCQ Option Shuffling : No Is Question Mandatory : No Calculator : None Response Time : N.A Think Time : N.A Minimum Instruction Time : 0**

**Correct Marks : 5 Wrong Marks : 1**

**Question Key Details :**

Key	Value
Comprehension	MCQ4

Meyerhold's contribution to theatre was:

1. Realism
2. Constructivism
3. Alienation
4. Fantastic Realism

**Options :**

485584134885. 1  
485584134886. 2  
485584134887. 3  
485584134888. 4

**Question Number : 407 Question Id : 48558433722 Question Type : MCQ Option Shuffling : No Is Question Mandatory : No Calculator : None Response Time : N.A Think Time : N.A Minimum Instruction Time : 0**

**Correct Marks : 5 Wrong Marks : 1**

**Question Key Details :**

Key	Value
Comprehension	MCQ4

ರಂಗಭೂಮಿಗೆ ಮೇಯರ್ ಹೋಲ್ಡರ್ ಕೊಡುಗೆಯು:

1. ವಾಸ್ತವಿಕತೆ
2. ರಚನಾತ್ಮಕತೆ
3. ಪರಕೀಯತೆ
4. ಕಲ್ಪನಾಮಯ ವಾಸ್ತವಿಕತೆ

**Options :**

485584134885. 1  
485584134886. 2  
485584134887. 3  
485584134888. 4

**Question Number : 408 Question Id : 48558433723 Question Type : MCQ Option Shuffling : No Is Question Mandatory : No Calculator : None Response Time : N.A Think Time : N.A Minimum Instruction Time : 0**

**Correct Marks : 5 Wrong Marks : 1**

**Question Key Details :**

Key	Value
Comprehension	MCQ4



On the Picture Frame stage, the inner proscenium consists of a floor-length side drapes, which are called:

1. Projections
2. Grand draperies
3. Tormentors
4. Teasers

**Options :**

485584134889. 1  
485584134890. 2  
485584134891. 3  
485584134892. 4

**Question Number : 408 Question Id : 48558433723 Question Type : MCQ Option Shuffling : No Is Question Mandatory : No Calculator : None Response Time : N.A Think Time : N.A Minimum Instruction Time : 0**

**Correct Marks : 5 Wrong Marks : 1**

**Question Key Details :**

Key	Value
Comprehension	MCQ4

ಚಿತ್ರ ಚೌಕಟ್ಟು ಹಂತದ ಮೇಲೆ, ಒಳಗಿನ ಪರದೆಯು ಒಂದು ನೆಲಮಟ್ಟ-ಉದ್ದದ ಬದಿ ಪರದೆಗಳನ್ನು ಹೊಂದಿರುತ್ತದೆ. ಇದನ್ನು ಏನನ್ನುತ್ತಾರೆ ಎಂದರೆ,

1. ಪ್ರೊಜೆಕ್ಷನ್‌ಗಳು
2. ಗ್ರಾಂಡ್ ಡ್ರಾಪರಿಗಳು
3. ಟೋರ್ಮೆಂಟರ್‌ಗಳು
4. ಟೀಸರ್‌ಗಳು

**Options :**

485584134889. 1  
485584134890. 2  
485584134891. 3  
485584134892. 4

**Question Number : 409 Question Id : 48558433724 Question Type : MCQ Option Shuffling : No Is Question Mandatory : No Calculator : None Response Time : N.A Think Time : N.A Minimum Instruction Time : 0**

**Correct Marks : 5 Wrong Marks : 1**

**Question Key Details :**

Key	Value
Comprehension	MCQ4

A fire-retardant curtain that can be lowered to fill the proscenium arch, is called:

1. Front Curtain
2. Asbestos Curtain
3. Back Curtain
4. Cyclorama

**Options :**

485584134893. 1  
485584134894. 2  
485584134895. 3  
485584134896. 4

**Question Number : 409 Question Id : 48558433724 Question Type : MCQ Option Shuffling : No Is Question Mandatory : No Calculator : None Response Time : N.A Think Time : N.A Minimum Instruction Time : 0**

**Correct Marks : 5 Wrong Marks : 1**

**Question Key Details :**

Key	Value
Comprehension	MCQ4

ರಂಗಸ್ಥಳದ ಕಮಾನನ್ನು ಮುಚ್ಚಲು ಕೆಳಗಿಳಿಸಬಹುದಾದ ಅಗ್ನಿಶಾಮಕ ಪರದೆಯನ್ನು ಏನನ್ನುತ್ತಾರೆಂದರೆ: [17](#)

1. ಮುಂದಿನ ಪರದೆ
2. ಆಸ್ಟೆಸ್ಟಾಸ್ ಪರದೆ
3. ಹಿಂದಿನ ಪರದೆ
4. ಸೈಕ್ಲೋರಮ

**Options :**

485584134893. 1  
485584134894. 2  
485584134895. 3  
485584134896. 4

**Question Number : 410 Question Id : 48558433725 Question Type : MCQ Option Shuffling : No Is Question Mandatory : No Calculator : None Response Time : N.A Think Time : N.A Minimum Instruction Time : 0**

**Correct Marks : 5 Wrong Marks : 1**

**Question Key Details :**

Key	Value
Comprehension	MCQ4

What is used as foundation or base for the rest of the Makeup?

1. Greasepaint
2. Mascara
3. Rouge
4. Powder

**Options :**

485584134897. 1  
485584134898. 2  
485584134899. 3  
485584134900. 4

**Question Number : 410 Question Id : 48558433725 Question Type : MCQ Option Shuffling : No Is Question Mandatory : No Calculator : None Response Time : N.A Think Time : N.A Minimum Instruction Time : 0**

**Correct Marks : 5 Wrong Marks : 1**

**Question Key Details :**

Key	Value
Comprehension	MCQ4

ಮೇಕ್-ಅಪ್‌ನ ರೆಸ್ಟ್‌ಗೆ ಬಳಸುವ ಫೌಂಡೇಶನ್ ಅಥವಾ ಬೇಸ್ ಏನು?

1. ಗ್ರೀಸ್ ಪೈಂಟ್
2. ಮಸ್ಕಾರ
3. ಕೆಂಪು ಬಣ್ಣ
4. ಪೌಡರ್

**Options :**

485584134897. 1  
485584134898. 2  
485584134899. 3  
485584134900. 4

**Question Number : 411 Question Id : 48558433726 Question Type : MCQ Option Shuffling : No Is Question Mandatory : No Calculator : None Response Time : N.A Think Time : N.A Minimum Instruction Time : 0**

**Correct Marks : 5 Wrong Marks : 1**

**Question Key Details :**

Key	Value
Comprehension	MCQ4

The three plays written by Kalidasa are:

- A. Malvika Agnimitram
- B. Abhijnan Shakuntalam
- C. Svapna Vasavdattam
- D. Vikramorvashiyam
- E. Uttara Ramacharitam

Choose the correct answer from the options given below:

- 1. D, E and B only
- 2. A, B and D only
- 3. B, C and E only
- 4. C, D and A only

**Options :**

- 485584134901. 1
- 485584134902. 2
- 485584134903. 3
- 485584134904. 4

**Question Number : 411 Question Id : 48558433726 Question Type : MCQ Option Shuffling : No Is Question Mandatory : No Calculator : None Response Time : N.A Think Time : N.A Minimum Instruction Time : 0**

**Correct Marks : 5 Wrong Marks : 1**

**Question Key Details :**

Key	Value
Comprehension	MCQ4

ಕಾಳಿದಾಸನು ಬರೆದ ಮೂರು ನಾಟಕಗಳೆಂದರೆ:

- A. ಮಾಳವಿಕಾ ಅಗ್ನಿಮಿತ್ರಂ
- B. ಅಭಿಜ್ಞಾನ ಶಾಕುಂತಲಂ
- C. ಸ್ವಪ್ನ ವಾಸವದತ್ತಮ್
- D. ವಿಕ್ರಮೋರ್ವಶೀಯಮ್
- E. ಉತ್ತರ ರಾಮಚರಿತಂ

ಕೆಳಗೆ ನೀಡಿರುವ ಆಯ್ಕೆಗಳಿಂದ ಸರಿಯಾದ ಉತ್ತರವನ್ನು ಆರಿಸಿ:

- 1. D, E ಮತ್ತು B ಮಾತ್ರ
- 2. A, B ಮತ್ತು D ಮಾತ್ರ
- 3. B, C ಮತ್ತು E ಮಾತ್ರ
- 4. C, D ಮತ್ತು A ಮಾತ್ರ

**Options :**

- 485584134901. 1
- 485584134902. 2
- 485584134903. 3
- 485584134904. 4

**Question Number : 412 Question Id : 48558433727 Question Type : MCQ Option Shuffling : No Is Question Mandatory : No Calculator : None Response Time : N.A Think Time : N.A Minimum Instruction Time : 0**

**Correct Marks : 5 Wrong Marks : 1**

**Question Key Details :**

Key	Value
Comprehension	MCQ4

The three famous plays written by Rabindranath Tagore are:

- A. Visarjan
- B. Rajdarshan
- C. Dakghar
- D. Nabanna
- E. Muktheadhara

Choose the correct answer from the options given below:

- 1. D, A and C only
- 2. A, C and E only
- 3. B, D and A only
- 4. C, E and B only

**Options :**

- 485584134905. 1
- 485584134906. 2
- 485584134907. 3
- 485584134908. 4

**Question Number : 412 Question Id : 48558433727 Question Type : MCQ Option Shuffling : No Is Question Mandatory : No Calculator : None Response Time : N.A Think Time : N.A Minimum Instruction Time : 0**

**Correct Marks : 5 Wrong Marks : 1**

**Question Key Details :**

Key	Value
Comprehension	MCQ4

ರವೀಂದ್ರನಾಥ ಟ್ಯಾಗೋರರು ಬರೆದ ಮೂರು ಪ್ರಸಿದ್ಧ ನಾಟಕಗಳೆಂದರೆ:

- A. ವಿಸರ್ಜನ್
- B. ರಾಜದರ್ಶನ್
- C. ಡಾಕ್ಟರ್
- D. ನಬನ್ನಾ
- E. ಮುಕ್ತಧಾರಾ

ಕೆಳಗೆ ನೀಡಿರುವ ಆಯ್ಕೆಗಳಿಂದ ಸರಿಯಾದ ಉತ್ತರವನ್ನು ಆರಿಸಿ:

1. D, A ಮತ್ತು C ಮಾತ್ರ
2. A, C ಮತ್ತು E ಮಾತ್ರ
3. B, D ಮತ್ತು A ಮಾತ್ರ
4. C, E ಮತ್ತು B ಮಾತ್ರ

**Options :**

- 485584134905. 1
- 485584134906. 2
- 485584134907. 3
- 485584134908. 4

**Question Number : 413 Question Id : 48558433728 Question Type : MCQ Option Shuffling : No Is Question Mandatory : No Calculator : None Response Time : N.A Think Time : N.A Minimum Instruction Time : 0**

**Correct Marks : 5 Wrong Marks : 1**

**Question Key Details :**

Key	Value
Comprehension	MCQ4

Identify from the following the three Shakespearean Comedies:

- A. Julius Caesar
- B. The Comedy of Errors
- C. The Two Gentlemen of Verona
- D. The Taming of the Shrew
- E. King Lear

Choose the correct answer from the options given below:

1. B, C and D only
2. A, B and C only
3. C, D and E only
4. A, C and E only

**Options :**

- 485584134909. 1
- 485584134910. 2
- 485584134911. 3
- 485584134912. 4

Question Number : 413 Question Id : 48558433728 Question Type : MCQ Option Shuffling : No Is Question Mandatory : No Calculator : None Response Time : N.A Think Time : N.A Minimum Instruction Time : 0  
Correct Marks : 5 Wrong Marks : 1

Question Key Details :

Key	Value
Comprehension	MCQ4

ಕೆಳಗಿನವುಗಳಿಂದ ಮೂರು ಶೇಕ್ಸ್‌ಪೀಯರ್‌ನ ಹಾಸ್ಯ ನಾಟಕಗಳನ್ನು ಗುರುತಿಸಿ:

- A. ಜೂಲಿಯಸ್ ಸೀಸರ್
- B. ದ ಕಾಮೆಡಿ ಆಫ್ ಎರಸರ್ಸ್
- C. ದಿ ಟೂ ಜೆಂಟಲ್‌ಮನ್ ಆಫ್ ವೆರೋನ
- D. ದಿ ಟೇಮಿಂಗ್ ಆಫ್ ಶ್ರೀವ್
- E. ಕಿಂಗ್ ಲೀಯರ್

ಕೆಳಗೆ ನೀಡಿರುವ ಆಯ್ಕೆಗಳಿಂದ ಸರಿಯಾದ ಉತ್ತರವನ್ನು ಆರಿಸಿ:

- 1. B, C ಮತ್ತು D ಮಾತ್ರ
- 2. A, B ಮತ್ತು C ಮಾತ್ರ
- 3. C, D ಮತ್ತು E ಮಾತ್ರ
- 4. A, C ಮತ್ತು E ಮಾತ್ರ

Options :

- 485584134909. 1
- 485584134910. 2
- 485584134911. 3
- 485584134912. 4

Question Number : 414 Question Id : 48558433729 Question Type : MCQ Option Shuffling : No Is Question Mandatory : No Calculator : None Response Time : N.A Think Time : N.A Minimum Instruction Time : 0  
Correct Marks : 5 Wrong Marks : 1

Question Key Details :

Key	Value
Comprehension	MCQ4

Identify from among the following, the three plays written by Harold Pinter:

- A. Homecoming
- B. The Caretaker
- C. The Chairs
- D. Endgame
- E. The Birthday Party

Choose the correct answer from the options given below:

- 1. A, B and E only
- 2. B, C and A only
- 3. C, D and B only
- 4. D, E and A only

**Options :**

- 485584134913. 1
- 485584134914. 2
- 485584134915. 3
- 485584134916. 4

**Question Number : 414 Question Id : 48558433729 Question Type : MCQ Option Shuffling : No Is Question Mandatory : No Calculator : None Response Time : N.A Think Time : N.A Minimum Instruction Time : 0**

**Correct Marks : 5 Wrong Marks : 1**

**Question Key Details :**

Key	Value
Comprehension	MCQ4

ಕೆಳಗಿನವುಗಳಿಂದ ಹೆರಾಲ್ಡ್ ಪಿಂಟರ್ ರವರು ಬರೆದ ಮೂರು ನಾಟಕಗಳನ್ನು ಗುರುತಿಸಿ:

- A. ಹೋಮ್‌ಕಮಿಂಗ್
- B. ದಿ ಕೇರ್‌ಟೇಕರ್
- C. ದಿ ಚೇರ್ಸ್
- D. ಎಂಡ್‌ಗೇಮ್
- E. ದಿ ಬರ್ತ್‌ಡೇ ಪಾರ್ಟಿ

ಕೆಳಗೆ ನೀಡಿರುವ ಆಯ್ಕೆಗಳಿಂದ ಸರಿಯಾದ ಉತ್ತರವನ್ನು ಆರಿಸಿ:

- 1. A, B ಮತ್ತು E ಮಾತ್ರ
- 2. B, C ಮತ್ತು A ಮಾತ್ರ
- 3. C, D ಮತ್ತು B ಮಾತ್ರ
- 4. D, E ಮತ್ತು A ಮಾತ್ರ

**Options :**

- 485584134913. 1
- 485584134914. 2
- 485584134915. 3
- 485584134916. 4



**Question Number : 415 Question Id : 48558433730 Question Type : MCQ Option Shuffling : No Is Question Mandatory : No Calculator : None Response Time : N.A Think Time : N.A Minimum Instruction Time : 0 Correct Marks : 5 Wrong Marks : 1**

**Question Key Details :**

Key	Value
Comprehension	MCQ4

Lee Strasberg was associated with which three of the following?

- A. Berliner Ensemble
- B. Royal Shakespeare Company
- C. Theatre Guild
- D. Group Theatre
- E. Actors' Studio

Choose the correct answer from the options given below:

- 1. A, B and D only
- 2. C, D and E only
- 3. B, C and D only
- 4. A, C and E only

**Options :**

- 485584134917. 1
- 485584134918. 2
- 485584134919. 3
- 485584134920. 4

**Question Number : 415 Question Id : 48558433730 Question Type : MCQ Option Shuffling : No Is Question Mandatory : No Calculator : None Response Time : N.A Think Time : N.A Minimum Instruction Time : 0 Correct Marks : 5 Wrong Marks : 1**

**Question Key Details :**

Key	Value
Comprehension	MCQ4

ಲೀ ಸ್ವಾಸ್‌ಬರ್ಗರ್‌ವರು ಕೆಲಗಿನ ಯಾವ ಮೂರರ ಜೊತೆ ಸಹಭಾಗಿಯಾಗಿದ್ದರು?

- A. ಬರ್ಲಿನ್‌ನರ್ ಎನ್‌ಸೆಂಬಲ್
- B. ರಾಯಲ್ ಶೇಕ್ಸ್‌ಪಿಯರ್ ಕಂಪೆನಿ
- C. ಥಿಯೇಟರ್ ಗಿಲ್ಡ್
- D. ಗ್ರೂಪ್ ಥಿಯೇಟರ್
- E. ಆಕ್ಟರ್ಸ್ ಸ್ಟುಡಿಯೋ

ಕೆಲಗೆ ನೀಡಿರುವ ಆಯ್ಕೆಗಳಿಂದ ಸರಿಯಾದ ಉತ್ತರವನ್ನು ಆರಿಸಿ:

- 1. A, B ಮತ್ತು D ಮಾತ್ರ
- 2. C, D ಮತ್ತು E ಮಾತ್ರ
- 3. B, C ಮತ್ತು D ಮಾತ್ರ
- 4. A, C ಮತ್ತು E ಮಾತ್ರ

**Options :**

- 485584134917. 1
- 485584134918. 2
- 485584134919. 3
- 485584134920. 4

**Question Number : 416 Question Id : 48558433731 Question Type : MCQ Option Shuffling : No Is Question Mandatory : No Calculator : None Response Time : N.A Think Time : N.A Minimum Instruction Time : 0**

**Correct Marks : 5 Wrong Marks : 1**

**Question Key Details :**

Key	Value
Comprehension	MCQ4

Match List I with List II

LIST I		LIST II	
A.	Kalidasa	I.	Svapna Vasavadattam
B.	Bhavabhuti	II.	Mricchakatikam
C.	Shudraka	III.	Abhijnan Shakuntalam
D.	Bhasa	IV.	Uttara Ramacharitam

Choose the correct answer from the options given below:

- 1. A-I, B-II, C-IV, D-III
- 2. A-II, B-III, C-I, D-IV
- 3. A-III, B-IV, C-II, D-I
- 4. A-IV, B-I, C-III, D-II

**Options :**

- 485584134921. 1
- 485584134922. 2
- 485584134923. 3
- 485584134924. 4

Question Number : 416 Question Id : 48558433731 Question Type : MCQ Option Shuffling : No Is Question Mandatory : No Calculator : None Response Time : N.A Think Time : N.A Minimum Instruction Time : 0  
Correct Marks : 5 Wrong Marks : 1

Question Key Details :

Key	Value
Comprehension	MCQ4

ಪಟ್ಟಿ - I ಅನ್ನು ಪಟ್ಟಿ - IIರ ಜೊತೆ ಹೊಂದಿಸಿ:

ಪಟ್ಟಿ - I	ಪಟ್ಟಿ - II
A. ಕಾಳಿದಾಸ	I. ಸ್ವಪ್ನ ವಾಸವದತ್ತಮ್
B. ಭವಭೂತಿ	II. ಮೃಚ್ಛಕಟಿಕಮ್
C. ಶೂದ್ರಕ	III. ಅಭಿಜ್ಞಾನ ಶಾಕುಂತಲಂ
D. ಭಾಸ	IV. ಉತ್ತರ ರಾಮಚರಿತಂ

ಕೆಳಗೆ ನೀಡಿರುವ ಆಯ್ಕೆಗಳಿಂದ ಸರಿಯಾದ ಉತ್ತರವನ್ನು ಆರಿಸಿ:

1. A-I, B-II, C-IV, D-III
2. A-II, B-III, C-I, D-IV
3. A-III, B-IV, C-II, D-I
4. A-IV, B-I, C-III, D-II

Options :

485584134921. 1
485584134922. 2
485584134923. 3
485584134924. 4

Question Number : 417 Question Id : 48558433732 Question Type : MCQ Option Shuffling : No Is Question Mandatory : No Calculator : None Response Time : N.A Think Time : N.A Minimum Instruction Time : 0

Correct Marks : 5 Wrong Marks : 1

Question Key Details :

Key	Value
Comprehension	MCQ4

Match List I with List II

LIST I		LIST II	
A.	Vijaya Mehta	I.	Santu Rangili
B.	Satyadev Dubey	II.	Andha Yug
C.	E. Alkazi	III.	Are Mayavi Sarovar
D.	Pravin Joshi	IV.	Ek Shunya Bajirao

Choose the correct answer from the options given below:

1. A-II, B-I, C-IV, D-III
2. A-III, B-II, C-I, D-IV
3. A-IV, B-III, C-II, D-I
4. A-I, B-IV, C-III, D-II

**Options :**

485584134925. 1  
485584134926. 2  
485584134927. 3  
485584134928. 4

**Question Number : 417 Question Id : 48558433732 Question Type : MCQ Option Shuffling : No Is Question Mandatory : No Calculator : None Response Time : N.A Think Time : N.A Minimum Instruction Time : 0**

**Correct Marks : 5 Wrong Marks : 1**

**Question Key Details :**

Key	Value
Comprehension	MCQ4

ಪಟ್ಟಿ - I ಅನ್ನು ಪಟ್ಟಿ - II ರ ಜೊತೆ ಹೊಂದಿಸಿ.

ಪಟ್ಟಿ - I		ಪಟ್ಟಿ - II	
A.	ವಿಜಯ ಮೆಹ್ತಾ	I.	ಶಾಂತು ರಂಗೀಲಿ
B.	ಸತ್ಯದೇವ್ ದುಬೆ	II.	ಅಂಧ ಯುಗ
C.	ಇ. ಅಲ್ಕಾಜಿ	III.	ಅರೆ ಮಾಯಾವಿ ಸರೋವರ್
D.	ಪ್ರವೀಣ್ ಜೋಶಿ	IV.	ಏಕ್ ಶೂನ್ಯ ಬಾಜಿರಾವ್

ಕೆಳಗೆ ನೀಡಿರುವ ಆಯ್ಕೆಗಳಿಂದ ಸರಿಯಾದ ಉತ್ತರವನ್ನು ಆರಿಸಿ:

1. A-II, B-I, C-IV, D-III
2. A-III, B-II, C-I, D-IV
3. A-IV, B-III, C-II, D-I
4. A-I, B-IV, C-III, D-II

**Options :**

485584134925. 1  
485584134926. 2  
485584134927. 3  
485584134928. 4

**Question Number : 418 Question Id : 48558433733 Question Type : MCQ Option Shuffling : No Is Question Mandatory : No Calculator : None Response Time : N.A Think Time : N.A Minimum Instruction Time : 0**

**Correct Marks : 5 Wrong Marks : 1**

**Question Key Details :**

Key	Value
Comprehension	MCQ4

Match List I with List II

LIST I		LIST II	
Plays		Characters	
A.	Julius Caesar	I.	Horatio
B.	Othello	II.	King Duncan
C.	Macbeth	III.	Desdemona
D.	Hamlet	IV.	Marcus Brutus

Choose the correct answer from the options given below:

1. A-IV, B-III, C-II, D-I
2. A-I, B-II, C-III, D-IV
3. A-IV, B-I, C-III, D-II
4. A-II, B-III, C-I, D-IV

**Options :**

- 485584134929. 1
- 485584134930. 2
- 485584134931. 3
- 485584134932. 4

**Question Number : 418 Question Id : 48558433733 Question Type : MCQ Option Shuffling : No Is Question Mandatory : No Calculator : None Response Time : N.A Think Time : N.A Minimum Instruction Time : 0**

**Correct Marks : 5 Wrong Marks : 1**

**Question Key Details :**

Key	Value
Comprehension	MCQ4

ಪಟ್ಟಿ - I ಅನ್ನು ಪಟ್ಟಿ - II ರ ಜೊತೆ ಹೊಂದಿಸಿ.

ಪಟ್ಟಿ - I ನಾಟಕಗಳು		ಪಟ್ಟಿ - II ಪಾತ್ರಗಳು	
A.	ಜೂಲಿಯಸ್ ಸೀಸರ್	I.	ಹೊರಾಟಿಯೋ
B.	ಓತೆಲ್ಲೋ	II.	ಕಿಂಗ್ ಡಂಕನ್
C.	ಮ್ಯಾಕ್‌ಬೆಥ್	III.	ಡೆಸ್‌ಡೆಮೋನಾ
D.	ಹ್ಯಾಮ್ಲೆಟ್	IV.	ಮಾರ್ಕಸ್ ಬ್ರೂಟಸ್

ಕೆಳಗೆ ನೀಡಿರುವ ಆಯ್ಕೆಗಳಿಂದ ಸರಿಯಾದ ಉತ್ತರವನ್ನು ಆರಿಸಿ:

1. A-IV, B-III, C-II, D-I
2. A-I, B-II, C-III, D-IV
3. A-IV, B-I, C-III, D-II
4. A-II, B-III, C-I, D-IV

**Options :**

485584134929. 1  
485584134930. 2  
485584134931. 3  
485584134932. 4

**Question Number : 419 Question Id : 48558433734 Question Type : MCQ Option Shuffling : No Is Question Mandatory : No Calculator : None Response Time : N.A Think Time : N.A Minimum Instruction Time : 0**

**Correct Marks : 5 Wrong Marks : 1**

**Question Key Details :**

Key	Value
Comprehension	MCQ4

Match List I with List II

LIST I		LIST II	
A.	Ibsen Henrik	I.	The Father
B.	Chekhov Anton	II.	Ghosts
C.	Strindberg August	III.	Death of a Salesman
D.	Arthur Miller	IV.	The Cherry Orchard

Choose the correct answer from the options given below:

1. A-I, B-III, C-IV, D-II
2. A-II, B-IV, C-I, D-III
3. A-III, B-I, C-II, D-IV
4. A-IV, B-II, C-III, D-I

**Options :**

485584134933. 1  
485584134934. 2  
485584134935. 3  
485584134936. 4

Question Number : 419 Question Id : 48558433734 Question Type : MCQ Option Shuffling : No Is Question Mandatory : No Calculator : None Response Time : N.A Think Time : N.A Minimum Instruction Time : 0

Correct Marks : 5 Wrong Marks : 1

Question Key Details :

Key	Value
Comprehension	MCQ4

ಪಟ್ಟಿ - I ಅನ್ನು ಪಟ್ಟಿ - II ಹೊಂದಿಸಿ:

ಪಟ್ಟಿ - I		ಪಟ್ಟಿ - II	
A.	ಇಸ್ಮನ್ ಹೆನ್ರಿಕ್	I.	ದಿ ಫಾದರ್
B.	ಚೆಖೋವ್ ಆಂಟೋನ್	II.	ಫೋಸ್ಟ್
C.	ಸ್ಟ್ರಾಂಡ್‌ಬರ್ಗ್ ಆಗಸ್ಟ್	III.	ಡೆತ್ ಆಫ್ ಸೆಲ್ವಮನ್
D.	ಆರ್ಥರ್ ಮಿಲ್ಲರ್	IV.	ದ ಚೆರಿ ಆರ್ಚಾರ್ಡ್

ಕೆಳಗೆ ನೀಡಿರುವ ಆಯ್ಕೆಗಳಿಂದ ಸರಿಯಾದ ಉತ್ತರವನ್ನು ಆರಿಸಿ:

1. A-I, B-III, C-IV, D-II
2. A-II, B-IV, C-I, D-III
3. A-III, B-I, C-II, D-IV
4. A-IV, B-II, C-III, D-I

Options :

485584134933. 1
485584134934. 2
485584134935. 3
485584134936. 4

Question Number : 420 Question Id : 48558433735 Question Type : MCQ Option Shuffling : No Is Question Mandatory : No Calculator : None Response Time : N.A Think Time : N.A Minimum Instruction Time : 0

Correct Marks : 5 Wrong Marks : 1

Question Key Details :

Key	Value
Comprehension	MCQ4

Give the correct sequence of the following Traditional Theatre Forms according to their Geographical origin from South to North.

- A. Tamasha
- B. Yakshagana
- C. Bhand Jashna
- D. Kutiyattam
- E. Svanga

Choose the correct answer from the options given below:

- 1. D, B, A, E, C
- 2. E, C, B, A, D
- 3. A, D, C, B, E
- 4. B, E, D, C, A

**Options :**

- 485584134937. 1
- 485584134938. 2
- 485584134939. 3
- 485584134940. 4

**Question Number : 420 Question Id : 48558433735 Question Type : MCQ Option Shuffling : No Is Question Mandatory : No Calculator : None Response Time : N.A Think Time : N.A Minimum Instruction Time : 0**

**Correct Marks : 5 Wrong Marks : 1**

**Question Key Details :**

Key	Value
Comprehension	MCQ4

ಕೆಳಗಿನ ಸಾಂಪ್ರದಾಯಿಕ ರಂಗಭೂಮಿಯ ರೂಪಕಗಳನ್ನು ಅವುಗಳ ಭೌಗೋಳಿಕ ಉಗಮದ ಪ್ರಕಾರ ದಕ್ಷಿಣದಿಂದ ಉತ್ತರಕ್ಕೆ ಸರಿಯಾದ ಅನುಕ್ರಮಣಿಕೆಯನ್ನು ನೀಡಿ.

- A. ತಮಾಷ
- B. ಯಕ್ಷಗಾನ
- C. ಭಾಂದ್ ಜಪ್ನಾ
- D. ಕುಟಿಯಾಟ್ಟಮ್
- E. ಸ್ವಂಗ

ಕೆಳಗೆ ನೀಡಿರುವ ಆಯ್ಕೆಗಳಿಂದ ಸರಿಯಾದ ಉತ್ತರವನ್ನು ಆರಿಸಿ:

- 1. D, B, A, E, C
- 2. E, C, B, A, D
- 3. A, D, C, B, E
- 4. B, E, D, C, A

**Options :**

- 485584134937. 1
- 485584134938. 2



485584134939. 3

485584134940. 4

## Political Science

Group Number :	11
Group Id :	485584749
Group Maximum Duration :	45
Group Minimum Duration :	45
Show Attended Group? :	No
Edit Attended Group? :	No
Break time :	0
Group Marks :	200
Is this Group for Examiner? :	No
Examiner permission :	Cant View
Show Progress Bar? :	No

## Political Science

Section Id :	485584867
Section Number :	1
Section type :	Online
Mandatory or Optional :	Mandatory
Number of Questions :	50
Number of Questions to be attempted :	40
Section Marks :	200
Enable Mark as Answered Mark for Review and Clear Response :	Yes
Maximum Instruction Time :	0
Sub-Section Number :	1
Sub-Section Id :	4855842442
Question Shuffling Allowed :	Yes
Is Section Default? :	null

Question Number : 421 Question Id : 48558433736 Question Type : MCQ Option Shuffling : No Is Question Mandatory : No Calculator : None Response Time : N.A Think Time : N.A Minimum Instruction Time : 0

Correct Marks : 5 Wrong Marks : 1

Question Key Details :

Key	Value
Comprehension	MCQ

Prime minister of India addressed a special speech on 14<sup>th</sup> and 15<sup>th</sup> August midnight.

It was called:

1. Trust in the Nation
2. Tryst with India
3. Tryst with destiny
4. Independent India

Options :

- 485584134941. 1
- 485584134942. 2
- 485584134943. 3
- 485584134944. 4

**Question Number : 422 Question Id : 48558433737 Question Type : MCQ Option Shuffling : No Is Question Mandatory : No Calculator : None Response Time : N.A Think Time : N.A Minimum Instruction Time : 0**

**Correct Marks : 5 Wrong Marks : 1**

**Question Key Details :**

Key	Value
Comprehension	MCQ

State requisition Act was passed in which year?

- 1. 1952
- 2. 1954
- 3. 1956
- 4. 1958

**Options :**

- 485584134945. 1
- 485584134946. 2
- 485584134947. 3
- 485584134948. 4

**Question Number : 423 Question Id : 48558433738 Question Type : MCQ Option Shuffling : No Is Question Mandatory : No Calculator : None Response Time : N.A Think Time : N.A Minimum Instruction Time : 0**

**Correct Marks : 5 Wrong Marks : 1**

**Question Key Details :**

Key	Value
Comprehension	MCQ

Given below are two statements: one is labelled as Assertion A and other is labelled as Reason R

**Assertion A:** Towards the end of 1990's the election commission started using the EVM.

**Reason R:** By 2004 the entire country had shifted to the EVM. But it was decided to place inside each polling booth a box for each candidate.

In the light of the above statements, choose the correct answer from the options given below

- 1. Both A and R are true and R is the correct explanation of A
- 2. Both A and R are true but R is the NOT correct explanation of A
- 3. A is true but R is not false
- 4. A is false but R is true

**Options :**

- 485584134949. 1
- 485584134950. 2

485584134951. 3

485584134952. 4

**Question Number : 424 Question Id : 48558433739 Question Type : MCQ Option Shuffling : No Is Question Mandatory : No Calculator : None Response Time : N.A Think Time : N.A Minimum Instruction Time : 0**

**Correct Marks : 5 Wrong Marks : 1**

**Question Key Details :**

Key	Value
Comprehension	MCQ

Match List I with List II

LIST I		LIST II	
A.	Adopted Buddhism in 1956 and the leader of anti-caste movement	I.	PRI
B.	Founded in 1929, as National revolutionary party	II.	Acharya Narendra Dev
C.	Freedom fighter and a scholar of Buddhism	III.	Bhartiya Jan Sangh
D.	In 1951 party was formed with Shyam Prasad Mukherjee	IV.	Babasaheb Bhimrao Ambedkar

Choose the correct answer from the options given below:

1. A-I, B-II, C-III, D-IV

2. A-IV, B-I, C-II, D-III

3. A-III, B-II, C-IV, D-I

4. A-IV, B-III, C-II, D-I

**Options :**

485584134953. 1

485584134954. 2

485584134955. 3

485584134956. 4

**Question Number : 425 Question Id : 48558433740 Question Type : MCQ Option Shuffling : No Is Question Mandatory : No Calculator : None Response Time : N.A Think Time : N.A Minimum Instruction Time : 0**

**Correct Marks : 5 Wrong Marks : 1**

**Question Key Details :**

Key	Value
Comprehension	MCQ

Who was the director of Marathi Film Simhasan?

1. Jabbar Patel

2. Vijay Tendulkar

3. Datta Bhat

4. Mohan Agashe

**Options :**

485584134957. 1

485584134958. 2

485584134959. 3

485584134960. 4

**Question Number : 426 Question Id : 48558433741 Question Type : MCQ Option Shuffling : No Is Question Mandatory : No Calculator : None Response Time : N.A Think Time : N.A Minimum Instruction Time : 0**

**Correct Marks : 5 Wrong Marks : 1**

**Question Key Details :**

Key	Value
Comprehension	MCQ

A section of the big industrialist got together in 1944 and drafted a joint proposal for setting up a planned economy in the country. It was called \_\_\_\_\_

1. Industries Plan
2. New strategy of business
3. Bombay Plan
4. Revised Plan

**Options :**

485584134961. 1

485584134962. 2

485584134963. 3

485584134964. 4

**Question Number : 427 Question Id : 48558433742 Question Type : MCQ Option Shuffling : No Is Question Mandatory : No Calculator : None Response Time : N.A Think Time : N.A Minimum Instruction Time : 0**

**Correct Marks : 5 Wrong Marks : 1**

**Question Key Details :**

Key	Value
Comprehension	MCQ

NITI Ayog came into existence on which date?

1. 7 January 2015
2. 1 January 2015
3. 10 January 2015
4. 12 January 2015

**Options :**

485584134965. 1

485584134966. 2

485584134967. 3

485584134968. 4

**Question Number : 428 Question Id : 48558433743 Question Type : MCQ Option Shuffling : No Is Question Mandatory : No Calculator : None Response Time : N.A Think Time : N.A Minimum Instruction Time : 0**

**Correct Marks : 5 Wrong Marks : 1**

**Question Key Details :**

Key	Value
-----	-------

Comprehension	MCQ
---------------	-----

Given below are two statements:

**Statements I:** The second five year plan stressed on heavy Industries.

**Statements II:** It declared that socialist pattern of society was its goal.

In the light of the above statements, choose the most appropriate answer from the options given below:

1. Both statement I and statement II are correct
2. Both statement I and statement II are incorrect
3. Statement I is correct but statement II is incorrect
4. Statement I is incorrect but statement II is correct

**Options :**

- 485584134969. 1
- 485584134970. 2
- 485584134971. 3
- 485584134972. 4

**Question Number : 429 Question Id : 48558433744 Question Type : MCQ Option Shuffling : No Is Question Mandatory : No Calculator : None Response Time : N.A Think Time : N.A Minimum Instruction Time : 0**

**Correct Marks : 5 Wrong Marks : 1**

**Question Key Details :**

Key	Value
Comprehension	MCQ

Choose the name of the author of 'Economy of Permanence'

1. K. N. Raj
2. P. C. Mahalannobis
3. J. C. Kumarappa
4. Karuna Banerjee

**Options :**

- 485584134973. 1
- 485584134974. 2
- 485584134975. 3
- 485584134976. 4

**Question Number : 430 Question Id : 48558433745 Question Type : MCQ Option Shuffling : No Is Question Mandatory : No Calculator : None Response Time : N.A Think Time : N.A Minimum Instruction Time : 0**

**Correct Marks : 5 Wrong Marks : 1**

**Question Key Details :**

Key	Value
Comprehension	MCQ

In which year Britain attacked Egypt over the Sues Canal issue

1. 1955
2. 1956
3. 1957
4. 1958

**Options :**

485584134977. 1  
485584134978. 2  
485584134979. 3  
485584134980. 4

**Question Number : 431 Question Id : 48558433746 Question Type : MCQ Option Shuffling : No Is Question Mandatory : No Calculator : None Response Time : N.A Think Time : N.A Minimum Instruction Time : 0**

**Correct Marks : 5 Wrong Marks : 1**

**Question Key Details :**

Key	Value
Comprehension	MCQ

In which Article of Indian constitution lays down some Directive Principles of state Policy on Promotion of International peace and security

1. Article 51
2. Article 50
3. Article 49
4. Article 48

**Options :**

485584134981. 1  
485584134982. 2  
485584134983. 3  
485584134984. 4

**Question Number : 432 Question Id : 48558433747 Question Type : MCQ Option Shuffling : No Is Question Mandatory : No Calculator : None Response Time : N.A Think Time : N.A Minimum Instruction Time : 0**

**Correct Marks : 5 Wrong Marks : 1**

**Question Key Details :**

Key	Value
Comprehension	MCQ

The first summit of NAM was held in Belgrade in \_\_\_\_\_

1. January 1961
2. March 1961
3. May 1961
4. September 1961

**Options :**

- 485584134985. 1
- 485584134986. 2
- 485584134987. 3
- 485584134988. 4

**Question Number : 433 Question Id : 48558433748 Question Type : MCQ Option Shuffling : No Is Question Mandatory : No Calculator : None Response Time : N.A Think Time : N.A Minimum Instruction Time : 0**

**Correct Marks : 5 Wrong Marks : 1**

**Question Key Details :**

Key	Value
Comprehension	MCQ

Frankly-----my impression (of Zhou Enlai) was very favourable \_\_\_\_\_ the Chinese premier is, I believe a good type of man and trust worthy

Who wrote there words in letter in December 1956

1. C Rajgopalachari
2. Mahatma Gandhi
3. Sardar Patel
4. Jawahar Lal Nehru

**Options :**

- 485584134989. 1
- 485584134990. 2
- 485584134991. 3
- 485584134992. 4

**Question Number : 434 Question Id : 48558433749 Question Type : MCQ Option Shuffling : No Is Question Mandatory : No Calculator : None Response Time : N.A Think Time : N.A Minimum Instruction Time : 0**

**Correct Marks : 5 Wrong Marks : 1**

**Question Key Details :**

Key	Value
Comprehension	MCQ

The first nuclear explosion undertaken by India in which year

1. 1973
2. 1974
3. 1975
4. 1976

**Options :**

485584134993. 1  
485584134994. 2  
485584134995. 3  
485584134996. 4

**Question Number : 435 Question Id : 48558433750 Question Type : MCQ Option Shuffling : No Is Question Mandatory : No Calculator : None Response Time : N.A Think Time : N.A Minimum Instruction Time : 0**

**Correct Marks : 5 Wrong Marks : 1**

**Question Key Details :**

Key	Value
Comprehension	MCQ

Match List I with List II

LIST I		LIST II	
A.	The goal of India's Foreign Policy in the period 1950-1964	I.	Tibetan spiritual leader who crossed over to India
B.	Panchsheel	II.	Preservation of territorial integrity sovereignty and economic development
C.	Bandung Conference	III.	Five principles of peaceful co-existence
D.	Dalai Lama	IV.	Led to the establishment of NAM

Choose the correct answer from the options given below:

1. A-I, B-II, C-III, D-IV
2. A-II, B-III, C-IV, D-I
3. A-II, B-IV, C-III, D-I
4. A-I, B-III, C-II, D-IV

**Options :**

485584134997. 1  
485584134998. 2  
485584134999. 3  
485584135000. 4



**Question Number : 436 Question Id : 48558433751 Question Type : MCQ Option Shuffling : No Is Question Mandatory : No Calculator : None Response Time : N.A Think Time : N.A Minimum Instruction Time : 0**

**Correct Marks : 5 Wrong Marks : 1**

**Question Key Details :**

Key	Value
Comprehension	MCQ

Who coined the famous slogan Jai Jawan Jai Kisan

1. Jawaharlal Nehru
2. Lal Bhadur Shastri
3. Lal Bahadur Lal
4. Mahatma Gandhi

**Options :**

- 485584135001. 1
- 485584135002. 2
- 485584135003. 3
- 485584135004. 4

**Question Number : 437 Question Id : 48558433752 Question Type : MCQ Option Shuffling : No Is Question Mandatory : No Calculator : None Response Time : N.A Think Time : N.A Minimum Instruction Time : 0**

**Correct Marks : 5 Wrong Marks : 1**

**Question Key Details :**

Key	Value
Comprehension	MCQ

Who introduced mid-day meal scheme for School Children.

1. K. Kamraj
2. K.N. Raj
3. Vinoba Bhave
4. K. Nizilingappa

**Options :**

- 485584135005. 1
- 485584135006. 2
- 485584135007. 3
- 485584135008. 4

**Question Number : 438 Question Id : 48558433753 Question Type : MCQ Option Shuffling : No Is Question Mandatory : No Calculator : None Response Time : N.A Think Time : N.A Minimum Instruction Time : 0**

**Correct Marks : 5 Wrong Marks : 1**

**Question Key Details :**

Key	Value
Comprehension	MCQ

Choose the name of the President of India from 1969 to 1974

1. Neelam Sanjeeva Reddy
2. V. V. Giri
3. Zakir Hussain
4. Fakruddin Ali Ahmed

**Options :**

485584135009. 1  
485584135010. 2  
485584135011. 3  
485584135012. 4

**Question Number : 439 Question Id : 48558433754 Question Type : MCQ Option Shuffling : No Is Question Mandatory : No Calculator : None Response Time : N.A Think Time : N.A Minimum Instruction Time : 0**

**Correct Marks : 5 Wrong Marks : 1**

**Question Key Details :**

Key	Value
Comprehension	MCQ

Who formed DMK as a Political Party in 1949

1. Ram Manohar Lohia
2. C. Natrajan Ananaduri
3. Nevile Maxwell
4. Karpoori Thakur

**Options :**

485584135013. 1  
485584135014. 2  
485584135015. 3  
485584135016. 4

**Question Number : 440 Question Id : 48558433755 Question Type : MCQ Option Shuffling : No Is Question Mandatory : No Calculator : None Response Time : N.A Think Time : N.A Minimum Instruction Time : 0**

**Correct Marks : 5 Wrong Marks : 1**

**Question Key Details :**

Key	Value
Comprehension	MCQ

'Sampoorna Kranti ab nara hai, bhavi itihias hamara hai'

Above slogan is associated with which movement

1. Anti-Arrack-Movement
2. Bihar Movement
3. Gujrat Movement
4. Chipko Movement

**Options :**

485584135017. 1  
485584135018. 2  
485584135019. 3  
485584135020. 4

**Question Number : 441 Question Id : 48558433756 Question Type : MCQ Option Shuffling : No Is Question Mandatory : No Calculator : None Response Time : N.A Think Time : N.A Minimum Instruction Time : 0**

**Correct Marks : 5 Wrong Marks : 1**

**Question Key Details :**

Key	Value
Comprehension	MCQ

In May 1977, The Janta Party government appointed which commission, to inquire into several aspects of allegation of abuse of authority.

1. Sheng Commission
2. Shai Commission
3. Shah Commission
4. J.P Commission

**Options :**

485584135021. 1  
485584135022. 2  
485584135023. 3  
485584135024. 4

**Question Number : 442 Question Id : 48558433757 Question Type : MCQ Option Shuffling : No Is Question Mandatory : No Calculator : None Response Time : N.A Think Time : N.A Minimum Instruction Time : 0**

**Correct Marks : 5 Wrong Marks : 1**

**Question Key Details :**

Key	Value
Comprehension	MCQ

Who were the Deputy Prime Minister of India from 1967 to 1969

1. Devi Lal
2. Charan Singh
3. Jagjivan Ram
4. Morarji Dessai

**Options :**

485584135025. 1  
485584135026. 2  
485584135027. 3  
485584135028. 4

**Question Number : 443 Question Id : 48558433758 Question Type : MCQ Option Shuffling : No Is Question Mandatory : No Calculator : None Response Time : N.A Think Time : N.A Minimum Instruction Time : 0**

**Correct Marks : 5 Wrong Marks : 1**

**Question Key Details :**

Key	Value
Comprehension	MCQ

Dalit Panthers, a militant organisation of Dalit Youth, was formed in which state in 1972

1. Kerala
2. Maharashtra
3. Bihar
4. West Bengal

**Options :**

485584135029. 1  
485584135030. 2  
485584135031. 3  
485584135032. 4

**Question Number : 444 Question Id : 48558433759 Question Type : MCQ Option Shuffling : No Is Question Mandatory : No Calculator : None Response Time : N.A Think Time : N.A Minimum Instruction Time : 0**

**Correct Marks : 5 Wrong Marks : 1**

**Question Key Details :**

Key	Value
Comprehension	MCQ

"Our blood was spilled for this glorious city and what we got was the right to eat stories. Now, now we must explode the building that kisses the sky." Who is the author of above poem.

1. Jayant Karve
2. Eleavor Zelliot
3. Namdeo Dahasal
4. Raj Kumari Amrit Kaur

**Options :**

485584135033. 1  
485584135034. 2  
485584135035. 3  
485584135036. 4

**Question Number : 445 Question Id : 48558433760 Question Type : MCQ Option Shuffling : No Is Question Mandatory : No Calculator : None Response Time : N.A Think Time : N.A Minimum Instruction Time : 0**

**Correct Marks : 5 Wrong Marks : 1**

**Question Key Details :**

Key	Value
Comprehension	MCQ

In which year RTI bill was tabled and received presidential assent.

1. June 2005
2. July 2006
3. June 2007
4. July 2008

**Options :**

485584135037. 1  
485584135038. 2  
485584135039. 3  
485584135040. 4

**Question Number : 446 Question Id : 48558433761 Question Type : MCQ Option Shuffling : No Is Question Mandatory : No Calculator : None Response Time : N.A Think Time : N.A Minimum Instruction Time : 0**

**Correct Marks : 5 Wrong Marks : 1**

**Question Key Details :**

Key	Value
Comprehension	MCQ

Given below are two statements: one is labelled as **Assertion A** and the other is labelled as **Reason R**

**Assertion A** : Asom Gana Sangram Parishad organised themselves as a regional political party called Asom Gana Parishad

**Reason R** : It came to power in 1985 with the promise of resolving the foreign national problem as well as to build a 'Golden Assam'

In the light of the above statements, choose the **correct** answer from the options given below:

1. Both **A** and **R** are true and **R** is the correct explanation of **A**
2. Both **A** and **R** are true and **R** is **NOT** the correct explanation of **A**
3. **A** is true but **R** is false
4. **A** is false but **R** is true

**Options :**

485584135041. 1

485584135042. 2

485584135043. 3

485584135044. 4

**Question Number : 447 Question Id : 48558433762 Question Type : MCQ Option Shuffling : No Is Question Mandatory : No Calculator : None Response Time : N.A Think Time : N.A Minimum Instruction Time : 0**

**Correct Marks : 5 Wrong Marks : 1**

**Question Key Details :**

Key	Value
Comprehension	MCQ

The bomb dropped by the US on Hiroshima city was code named

1. Fat Man
2. Little Boy
3. Fat Woman
4. Little Girl

**Options :**

485584135045. 1

485584135046. 2

485584135047. 3

485584135048. 4

**Question Number : 448 Question Id : 48558433763 Question Type : MCQ Option Shuffling : No Is Question Mandatory : No Calculator : None Response Time : N.A Think Time : N.A Minimum Instruction Time : 0**

**Correct Marks : 5 Wrong Marks : 1**

**Question Key Details :**

Key	Value
Comprehension	MCQ

Name the leader who was the first Prime Minister of Ghana and founder figure of NAM.

1. Josip Broz
2. Kwame Nkrumah
3. Kwame Skrumah
4. Gamal Abdel

**Options :**

- 485584135049. 1
- 485584135050. 2
- 485584135051. 3
- 485584135052. 4

**Question Number : 449 Question Id : 48558433764 Question Type : MCQ Option Shuffling : No Is Question Mandatory : No Calculator : None Response Time : N.A Think Time : N.A Minimum Instruction Time : 0**

**Correct Marks : 5 Wrong Marks : 1**

**Question Key Details :**

Key	Value
Comprehension	MCQ

Name the founder of Bolshevik Communist Party.

1. Joseph Stalin
2. Vladimir Lenin
3. Boris Yeltsin
4. Leonid Brezhnev

**Options :**

- 485584135053. 1
- 485584135054. 2
- 485584135055. 3
- 485584135056. 4

**Question Number : 450 Question Id : 48558433765 Question Type : MCQ Option Shuffling : No Is Question Mandatory : No Calculator : None Response Time : N.A Think Time : N.A Minimum Instruction Time : 0**

**Correct Marks : 5 Wrong Marks : 1**

**Question Key Details :**

Key	Value
Comprehension	MCQ

Who was the first elected President of Russia?

1. Mikhail Gorbachev
2. Fidel Castro
3. Boris Yeltsin
4. Joseph Stalin

**Options :**

485584135057. 1  
485584135058. 2  
485584135059. 3  
485584135060. 4

**Question Number : 451 Question Id : 48558433766 Question Type : MCQ Option Shuffling : No Is Question Mandatory : No Calculator : None Response Time : N.A Think Time : N.A Minimum Instruction Time : 0**

**Correct Marks : 5 Wrong Marks : 1**

**Question Key Details :**

Key	Value
Comprehension	MCQ

- A. On 19 March 2003, the US launched its invasion of Iraq.
- B. US has lost over 3000 military personnel in the war
- C. The ostensible purpose of the invasion was to destroy Iraq from developing weapons at mass destruction
- D. More than forty other countries joined in the US led coalition of the willing after the UN refused to give its mandate to the invasion

Choose the most appropriate answer from the options given below:

1. A, C, D only
2. A, B, C only
3. A, B, D only
4. C, D, A only

**Options :**

485584135061. 1  
485584135062. 2  
485584135063. 3  
485584135064. 4

**Question Number : 452 Question Id : 48558433767 Question Type : MCQ Option Shuffling : No Is Question Mandatory : No Calculator : None Response Time : N.A Think Time : N.A Minimum Instruction Time : 0**

**Correct Marks : 5 Wrong Marks : 1**

**Question Key Details :**

Key	Value
Comprehension	MCQ



In which year the Lisbon Treaty came in to force?

1. 2007
2. 2008
3. 2009
4. 2010

**Options :**

- 485584135065. 1
- 485584135066. 2
- 485584135067. 3
- 485584135068. 4

**Question Number : 453 Question Id : 48558433768 Question Type : MCQ Option Shuffling : No Is Question Mandatory : No Calculator : None Response Time : N.A Think Time : N.A Minimum Instruction Time : 0**

**Correct Marks : 5 Wrong Marks : 1**

**Question Key Details :**

Key	Value
Comprehension	MCQ

Bangladesh was a part of Pakistan from\_\_\_\_\_

1. 1947 to 1971
2. 1947 to 1969
3. 1948 to 1949
4. 1948 to 1969

**Options :**

- 485584135069. 1
- 485584135070. 2
- 485584135071. 3
- 485584135072. 4

**Question Number : 454 Question Id : 48558433769 Question Type : MCQ Option Shuffling : No Is Question Mandatory : No Calculator : None Response Time : N.A Think Time : N.A Minimum Instruction Time : 0**

**Correct Marks : 5 Wrong Marks : 1**

**Question Key Details :**

Key	Value
Comprehension	MCQ

In 2008, in which state the monarchy was abolished and emerged as a democratic republic?

1. Bhutan
2. Nepal
3. Bangladesh
4. Maldives

**Options :**

485584135073. 1  
485584135074. 2  
485584135075. 3  
485584135076. 4

**Question Number : 455 Question Id : 48558433770 Question Type : MCQ Option Shuffling : No Is Question Mandatory : No Calculator : None Response Time : N.A Think Time : N.A Minimum Instruction Time : 0**

**Correct Marks : 5 Wrong Marks : 1**

**Question Key Details :**

Key	Value
Comprehension	MCQ

Name the 9th Secretary-General of UN.

1. Antonio Guterres
2. Ban Ki Moon
3. Kofi A. Annan
4. U. Thart

**Options :**

485584135077. 1  
485584135078. 2  
485584135079. 3  
485584135080. 4

**Question Number : 456 Question Id : 48558433771 Question Type : MCQ Option Shuffling : No Is Question Mandatory : No Calculator : None Response Time : N.A Think Time : N.A Minimum Instruction Time : 0**

**Correct Marks : 5 Wrong Marks : 1**

**Question Key Details :**

Key	Value
Comprehension	MCQ

The world trade organisation sets the rules for....

1. Global Economy
2. Global Trade
3. Global Future
4. Global Issues

**Options :**

- 485584135081. 1
- 485584135082. 2
- 485584135083. 3
- 485584135084. 4

**Question Number : 457 Question Id : 48558433772 Question Type : MCQ Option Shuffling : No Is Question Mandatory : No Calculator : None Response Time : N.A Think Time : N.A Minimum Instruction Time : 0**

**Correct Marks : 5 Wrong Marks : 1**

**Question Key Details :**

Key	Value
Comprehension	MCQ

The Nuclear Non Proliferation Treaty of 1968 was an \_\_\_\_\_

1. Arms control treaty
2. Arms reduction treaty
3. Arms availability treaty
4. Arms for developed country

**Options :**

- 485584135085. 1
- 485584135086. 2
- 485584135087. 3
- 485584135088. 4

**Question Number : 458 Question Id : 48558433773 Question Type : MCQ Option Shuffling : No Is Question Mandatory : No Calculator : None Response Time : N.A Think Time : N.A Minimum Instruction Time : 0**

**Correct Marks : 5 Wrong Marks : 1**

**Question Key Details :**

Key	Value
Comprehension	MCQ

When was Earth Summit held in Rio-de-Janeiro?

1. June 1991
2. June 1992
3. June 1993
4. June 1994

**Options :**

- 485584135089. 1
- 485584135090. 2
- 485584135091. 3
- 485584135092. 4

**Question Number : 459 Question Id : 48558433774 Question Type : MCQ Option Shuffling : No Is Question Mandatory : No Calculator : None Response Time : N.A Think Time : N.A Minimum Instruction Time : 0**

**Correct Marks : 5 Wrong Marks : 1**

**Question Key Details :**

Key	Value
Comprehension	MCQ

India signed and ratified the 1997 Kyoto Protocol in

1. August 2001
2. August 1997
3. August 2003
4. August 2002

**Options :**

- 485584135093. 1
- 485584135094. 2
- 485584135095. 3
- 485584135096. 4

**Question Number : 460 Question Id : 48558433775 Question Type : MCQ Option Shuffling : No Is Question Mandatory : No Calculator : None Response Time : N.A Think Time : N.A Minimum Instruction Time : 0**

**Correct Marks : 5 Wrong Marks : 1**

**Question Key Details :**

Key	Value
Comprehension	MCQ

The energy Conservation Act was passed in India in which year?

1. 2000
2. 2001
3. 2002
4. 2003

**Options :**

485584135097. 1  
485584135098. 2  
485584135099. 3  
485584135100. 4

**Sub-Section Number :** 2  
**Sub-Section Id :** 4855842443  
**Question Shuffling Allowed :** No  
**Is Section Default? :** null

**Question Number : 461 Question Id : 48558433776 Question Type : MCQ Option Shuffling : No Is Question Mandatory : No Calculator : None Response Time : N.A Think Time : N.A Minimum Instruction Time : 0 Correct Marks : 5 Wrong Marks : 1**

**Question Key Details :**

Key	Value
Comprehension	Comp1

Read the paragraph given below and answer the following questions.

Shastri was the country's Prime Minister from 1964-1966. During Shastri's brief Prime Ministership, the country faced two major challenges. While India was still recovering from the economic implications of the war with China, failed monsoons, drought and serious food crisis presented a grave challenge. The country also faced a war with Pakistan in 1965. Shastri's famous slogan 'Jai Jawan Jai Kisan', symbolised the country's resolve to face both these challenges.

Shastri's Prime Ministership came to an abrupt end on 10 January 1966, when he suddenly expired in Tashkent, then in USSR and currently the capital of Uzbekistan. He was there to discuss and sign an agreement with Muhammad Ayub Khan, the then President of Pakistan, to end the war.

Lal Bahadur Shastri's Prime Ministership came to an abrupt end on \_\_\_\_\_

1. 10 January 1966
2. 10 February 1966
3. 10 January 1964
4. 10 February 1964

**Options :**

485584135101. 1  
485584135102. 2  
485584135103. 3  
485584135104. 4

**Question Number : 462 Question Id : 48558433777 Question Type : MCQ Option Shuffling : No Is Question Mandatory : No Calculator : None Response Time : N.A Think Time : N.A Minimum Instruction Time : 0**

**Correct Marks : 5 Wrong Marks : 1**

**Question Key Details :**

Key	Value
Comprehension	Comp1

Read the paragraph given below and answer the following questions.

Shastri was the country's Prime Minister from 1964-1966. During Shastri's brief Prime Ministership, the country faced two major challenges. While India was still recovering from the economic implications of the war with China, failed monsoons, drought and serious food crisis presented a grave challenge. The country also faced a war with Pakistan in 1965. Shastri's famous slogan 'Jai Jawan Jai Kisan', symbolised the country's resolve to face both these challenges.

Shastri's Prime Ministership came to an abrupt end on 10 January 1966, when he suddenly expired in Tashkent, then in USSR and currently the capital of Uzbekistan. He was there to discuss and sign an agreement with Muhammad Ayub Khan, the then President of Pakistan, to end the war.

During the Prime Ministership of Lal Bahadur Shastri, India faces a war with

1. China
2. Pakistan
3. Bhutan
4. Sri Lanka

**Options :**

- 485584135105. 1
- 485584135106. 2
- 485584135107. 3
- 485584135108. 4

**Question Number : 463 Question Id : 48558433778 Question Type : MCQ Option Shuffling : No Is Question Mandatory : No Calculator : None Response Time : N.A Think Time : N.A Minimum Instruction Time : 0**

**Correct Marks : 5 Wrong Marks : 1**

**Question Key Details :**

Key	Value
Comprehension	Comp1

Read the paragraph given below and answer the following questions.

Shastri was the country's Prime Minister from 1964-1966. During Shastri's brief Prime Ministership, the country faced two major challenges. While India was still recovering from the economic implications of the war with China, failed monsoons, drought and serious food crisis presented a grave challenge. The country also faced a war with Pakistan in 1965. Shastri's famous slogan 'Jai Jawan Jai Kisan', symbolised the country's resolve to face both these challenges.

Shastri's Prime Ministership came to an abrupt end on 10 January 1966, when he suddenly expired in Tashkent, then in USSR and currently the capital of Uzbekistan. He was there to discuss and sign an agreement with Muhammad Ayub Khan, the then President of Pakistan, to end the war.

Lal Bahadur Shastri was India's Prime Minister from:

1. 1965 - 1966
2. 1962 - 1966
3. 1964 - 1966
4. 1962 - 1966

**Options :**

- 485584135109. 1
- 485584135110. 2
- 485584135111. 3
- 485584135112. 4

**Question Number : 464 Question Id : 48558433779 Question Type : MCQ Option Shuffling : No Is Question Mandatory : No Calculator : None Response Time : N.A Think Time : N.A Minimum Instruction Time : 0**

**Correct Marks : 5 Wrong Marks : 1**

**Question Key Details :**

Key	Value
Comprehension	Comp1

Read the paragraph given below and answer the following questions.

Shastri was the country's Prime Minister from 1964-1966. During Shastri's brief Prime Ministership, the country faced two major challenges. While India was still recovering from the economic implications of the war with China, failed monsoons, drought and serious food crisis presented a grave challenge. The country also faced a war with Pakistan in 1965. Shastri's famous slogan 'Jai Jawan Jai Kisan', symbolised the country's resolve to face both these challenges.

Shastri's Prime Ministership came to an abrupt end on 10 January 1966, when he suddenly expired in Tashkent, then in USSR and currently the capital of Uzbekistan. He was there to discuss and sign an agreement with Muhammad Ayub Khan, the then President of Pakistan, to end the war.

Tashkent is the capital of which country now?

1. USSR
2. Uzbekistan
3. China
4. Pakistan

**Options :**

485584135113. 1  
485584135114. 2  
485584135115. 3  
485584135116. 4

**Question Number : 465 Question Id : 48558433780 Question Type : MCQ Option Shuffling : No Is Question Mandatory : No Calculator : None Response Time : N.A Think Time : N.A Minimum Instruction Time : 0**

**Correct Marks : 5 Wrong Marks : 1**

**Question Key Details :**

Key	Value
Comprehension	Comp1

Read the paragraph given below and answer the following questions.

Shastri was the country's Prime Minister from 1964-1966. During Shastri's brief Prime Ministership, the country faced two major challenges. While India was still recovering from the economic implications of the war with China, failed monsoons, drought and serious food crisis presented a grave challenge. The country also faced a war with Pakistan in 1965. Shastri's famous slogan 'Jai Jawan Jai Kisan', symbolised the country's resolve to face both these challenges.

Shastri's Prime Ministership came to an abrupt end on 10 January 1966, when he suddenly expired in Tashkent, then in USSR and currently the capital of Uzbekistan. He was there to discuss and sign an agreement with Muhammad Ayub Khan, the then President of Pakistan, to end the war.

Name the leader who had resigned from the position of Railway Minister accepting moral responsibility for a major railway accident.

1. K. Kamraj
2. Morarji Desai
3. Jawahar Lal Nehru
4. Lal Bahadur Shastri

**Options :**

485584135117. 1  
485584135118. 2  
485584135119. 3  
485584135120. 4

**Sub-Section Number :**

3

**Sub-Section Id :**

4855842444

**Question Shuffling Allowed :**

No



Is Section Default? :

null

Question Number : 466 Question Id : 48558433781 Question Type : MCQ Option Shuffling : No Is Question Mandatory : No Calculator : None Response Time : N.A Think Time : N.A Minimum Instruction Time : 0

Correct Marks : 5 Wrong Marks : 1

Question Key Details :

Key	Value
Comprehension	Comp2

The Indian Government is already participating in global efforts through a number of programmes. For example, India's National Auto-fuel Policy mandates cleaner fuels for vehicles. The energy Conservation Act, passed in 2001, outlines initiative to improve energy efficiency. Similarly, the Electricity Act of 2003 encourages the use of renewable energy. Recent trends in importing natural gas and encouraging the adoption of clean coal technologies show that India has been making real efforts. the Government is also keen to launch a National Mission on Biodiesel, using about 11 million hectares of land to produce biodiesel by 2011-2012. India ratified the Paris Climate Agreement on 2 October 2016. And India has one of the largest renewable energy programmes in the world.

A review of the implementation of the agreements at the Earth Summit in Rio was undertaken by India in 1997.

India feels this contravenes very spirit of UNFCCC. Neither does it seem fair to impose restrictions on India when the country's rise in per capita carbon emissions by 2030 is likely to still represent less than half the world average of 3.8 tonnes in 2000. Indian emissions are predicted to rise from 0.9 tonnes per capita in 2000 to 1.6 tonnes per capita in 2030

Reservation Act was passed in

1. 2000
2. 2001
3. 2002
4. 2003

Options :

- 485584135121. 1
- 485584135122. 2
- 485584135123. 3
- 485584135124. 4

Question Number : 467 Question Id : 48558433782 Question Type : MCQ Option Shuffling : No Is Question Mandatory : No Calculator : None Response Time : N.A Think Time : N.A Minimum Instruction Time : 0

Correct Marks : 5 Wrong Marks : 1

Question Key Details :

Key	Value
Comprehension	Comp2

The Indian Government is already participating in global efforts through a number of programmes. For example, India's National Auto-fuel Policy mandates cleaner fuels for vehicles. The energy Conservation Act, passed in 2001, outlines initiative to improve energy efficiency. Similarly, the Electricity Act of 2003 encourages the use of renewable energy. Recent trends in importing natural gas and encouraging the adoption of clean coal technologies show that India has been making real efforts. the Government is also keen to launch a National Mission on Biodiesel, using about 11 million hectares of land to produce biodiesel by 2011-2012. India ratified the Paris Climate Agreement on 2 October 2016. And India has one of the largest renewable energy programmes in the world.

A review of the implementation of the agreements at the Earth Summit in Rio was undertaken by India in 1997.

India feels this contravenes very spirit of UNFCCC. Neither does it seem fair to impose restrictions on India when the country's rise in per capita carbon emissions by 2030 is likely to still represent less than half the world average of 3.8 tonnes in 2000. Indian emissions are predicted to rise from 0.9 tonnes per capita in 2000 to 1.6 tonnes per capita in 2030

Electricity Act of 2003 encourages the uses of

1. Renewable energy
2. Non renewable energy
3. No use of col technology
4. Not importing the natural gas

**Options :**

- 485584135125. 1
- 485584135126. 2
- 485584135127. 3
- 485584135128. 4

**Question Number : 468 Question Id : 48558433783 Question Type : MCQ Option Shuffling : No Is Question Mandatory : No Calculator : None Response Time : N.A Think Time : N.A Minimum Instruction Time : 0**

**Correct Marks : 5 Wrong Marks : 1**

**Question Key Details :**

Key	Value
Comprehension	Comp2

The Indian Government is already participating in global efforts through a number of programmes. For example, India's National Auto-fuel Policy mandates cleaner fuels for vehicles. The energy Conservation Act, passed in 2001, outlines initiative to improve energy efficiency. Similarly, the Electricity Act of 2003 encourages the use of renewable energy. Recent trends in importing natural gas and encouraging the adoption of clean coal technologies show that India has been making real efforts. the Government is also keen to launch a National Mission on Biodiesel, using about 11 million hectares of land to produce biodiesel by 2011-2012. India ratified the Paris Climate Agreement on 2 October 2016. And India has one of the largest renewable energy programmes in the world.

A review of the implementation of the agreements at the Earth Summit in Rio was undertaken by India in 1997.

India feels this contravenes very spirit of UNFCCC. Neither does it seem fair to impose restrictions on India when the country's rise in per capita carbon emissions by 2030 is likely to still represent less than half the world average of 3.8 tonnes in 2000. Indian emissions are predicted to rise from 0.9 tonnes per capita in 2000 to 1.6 tonnes per capita in 2030

In which year India ratified the Paris Climate Agreement?

1. 2014
2. 2015
3. 2016
4. 2017

**Options :**

- 485584135129. 1
- 485584135130. 2
- 485584135131. 3
- 485584135132. 4

**Question Number : 469 Question Id : 48558433784 Question Type : MCQ Option Shuffling : No Is Question Mandatory : No Calculator : None Response Time : N.A Think Time : N.A Minimum Instruction Time : 0**

**Correct Marks : 5 Wrong Marks : 1**

**Question Key Details :**

Key	Value
Comprehension	Comp2

The Indian Government is already participating in global efforts through a number of programmes. For example, India's National Auto-fuel Policy mandates cleaner fuels for vehicles. The energy Conservation Act, passed in 2001, outlines initiative to improve energy efficiency. Similarly, the Electricity Act of 2003 encourages the use of renewable energy. Recent trends in importing natural gas and encouraging the adoption of clean coal technologies show that India has been making real efforts. the Government is also keen to launch a National Mission on Biodiesel, using about 11 million hectares of land to produce biodiesel by 2011-2012. India ratified the Paris Climate Agreement on 2 October 2016. And India has one of the largest renewable energy programmes in the world.

A review of the implementation of the agreements at the Earth Summit in Rio was undertaken by India in 1997.

India feels this contravenes very spirit of UNFCCC. Neither does it seem fair to impose restrictions on India when the country's rise in per capita carbon emissions by 2030 is likely to still represent less than half the world average of 3.8 tonnes in 2000. Indian emissions are predicted to rise from 0.9 tonnes per capita in 2000 to 1.6 tonnes per capita in 2030

India emission are predicted to rise 1.6 tonnes per capital in \_\_\_\_\_

1. 2025
2. 2030
3. 2035
4. 2040

**Options :**

- 485584135133. 1
- 485584135134. 2
- 485584135135. 3
- 485584135136. 4

**Question Number : 470 Question Id : 48558433785 Question Type : MCQ Option Shuffling : No Is Question Mandatory : No Calculator : None Response Time : N.A Think Time : N.A Minimum Instruction Time : 0**

**Correct Marks : 5 Wrong Marks : 1**

**Question Key Details :**

Key	Value
Comprehension	Comp2

The Indian Government is already participating in global efforts through a number of programmes. For example, India's National Auto-fuel Policy mandates cleaner fuels for vehicles. The energy Conservation Act, passed in 2001, outlines initiative to improve energy efficiency. Similarly, the Electricity Act of 2003 encourages the use of renewable energy. Recent trends in importing natural gas and encouraging the adoption of clean coal technologies show that India has been making real efforts. the Government is also keen to launch a National Mission on Biodiesel, using about 11 million hectares of land to produce biodiesel by 2011-2012. India ratified the Paris Climate Agreement on 2 October 2016. And India has one of the largest renewable energy programmes in the world.

A review of the implementation of the agreements at the Earth Summit in Rio was undertaken by India in 1997.

India feels this contravenes very spirit of UNFCCC. Neither does it seem fair to impose restrictions on India when the country's rise in per capita carbon emissions by 2030 is likely to still represent less than half the world average of 3.8 tonnes in 2000. Indian emissions are predicted to rise from 0.9 tonnes per capita in 2000 to 1.6 tonnes per capita in 2030

Write the full form of UNFCCC

1. United Nations Framework Convention on Climate Change
2. Union Nations Framework Connection on Climate Change
3. United National Framework Connection on Climate Change
4. United Nations Forum Convention on Climate Change

**Options :**

- 485584135137. 1
- 485584135138. 2
- 485584135139. 3
- 485584135140. 4

## Sociology

<b>Group Number :</b>	12
<b>Group Id :</b>	485584750
<b>Group Maximum Duration :</b>	45
<b>Group Minimum Duration :</b>	45
<b>Show Attended Group? :</b>	No
<b>Edit Attended Group? :</b>	No
<b>Break time :</b>	0
<b>Group Marks :</b>	200
<b>Is this Group for Examiner? :</b>	No
<b>Examiner permission :</b>	Cant View
<b>Show Progress Bar? :</b>	No

## Sociology

<b>Section Id :</b>	485584868
<b>Section Number :</b>	1
<b>Section type :</b>	Online

**Mandatory or Optional :** Mandatory  
**Number of Questions :** 50  
**Number of Questions to be attempted :** 40  
**Section Marks :** 200  
**Enable Mark as Answered Mark for Review and Clear Response :** Yes  
**Maximum Instruction Time :** 0  
**Sub-Section Number :** 1  
**Sub-Section Id :** 4855842445  
**Question Shuffling Allowed :** Yes  
**Is Section Default? :** null

**Question Number : 471 Question Id : 48558433786 Question Type : MCQ Option Shuffling : No Is Question Mandatory : No Calculator : None Response Time : N.A Think Time : N.A Minimum Instruction Time : 0**

**Correct Marks : 5 Wrong Marks : 1**

**Question Key Details :**

Key	Value
Comprehension	MCQ

What is the basis of creation of the new states of Chattisgarh, Uttarakhand and Jharkhand?

1. Ethnicity
2. Administrative
3. Linguistic
4. Special Status

**Options :**

- 485584135141. 1
- 485584135142. 2
- 485584135143. 3
- 485584135144. 4

**Question Number : 472 Question Id : 48558433787 Question Type : MCQ Option Shuffling : No Is Question Mandatory : No Calculator : None Response Time : N.A Think Time : N.A Minimum Instruction Time : 0**

**Correct Marks : 5 Wrong Marks : 1**

**Question Key Details :**

Key	Value
Comprehension	MCQ

Policies which are aimed at persuading, encouraging or forcing all citizens to adopt a uniform set of cultural values and norms is called

1. Pluralist
2. Nationalist
3. Assimilationist
4. Multiculturalist

**Options :**

- 485584135145. 1
- 485584135146. 2

485584135147. 3  
485584135148. 4

**Question Number : 473 Question Id : 48558433788 Question Type : MCQ Option Shuffling : No Is Question Mandatory : No Calculator : None Response Time : N.A Think Time : N.A Minimum Instruction Time : 0**

**Correct Marks : 5 Wrong Marks : 1**

**Question Key Details :**

Key	Value
Comprehension	MCQ

According to western context, what does secularism actually denote?

1. Religious Chauvinism
2. Separation of religious and political authority
3. All religions are same and must
4. Keeping away the hostility between religions

**Options :**

485584135149. 1  
485584135150. 2  
485584135151. 3  
485584135152. 4

**Question Number : 474 Question Id : 48558433789 Question Type : MCQ Option Shuffling : No Is Question Mandatory : No Calculator : None Response Time : N.A Think Time : N.A Minimum Instruction Time : 0**

**Correct Marks : 5 Wrong Marks : 1**

**Question Key Details :**

Key	Value
Comprehension	MCQ

Who argued that the nature of urban impact varies according to the kind relation a village has with a city or town?

1. M.S.A. Rao
2. Emile Durkheim
3. M.N. Srinivas
4. Louis Wirth

**Options :**

485584135153. 1  
485584135154. 2  
485584135155. 3  
485584135156. 4

**Question Number : 475 Question Id : 48558433790 Question Type : MCQ Option Shuffling : No Is Question Mandatory : No Calculator : None Response Time : N.A Think Time : N.A Minimum Instruction Time : 0**

**Correct Marks : 5 Wrong Marks : 1**

**Question Key Details :**

Key	Value
-----	-------

The different ways in which British colonialism lives on in contemporary India:

- A. Learning Indian classical music and dance
- B. Eating using fork and spoon
- C. Wearing skirts and trousers
- D. Online education
- E. Driving on the left side of the road

Choose the correct answer from the options given below:

- 1. B, D, E only
- 2. B, C, E only
- 3. A, B, D only
- 4. A, C, D only

**Options :**

- 485584135157. 1
- 485584135158. 2
- 485584135159. 3
- 485584135160. 4

**Question Number : 476 Question Id : 48558433791 Question Type : MCQ Option Shuffling : No Is Question Mandatory : No Calculator : None Response Time : N.A Think Time : N.A Minimum Instruction Time : 0**

**Correct Marks : 5 Wrong Marks : 1**

**Question Key Details :**

Key	Value
Comprehension	MCQ

High rates of infant mortality and maternal mortality are the result of which factors?

- 1. Poverty and development
- 2. Poverty and illiteracy
- 3. Life expectancy and poverty
- 4. Literacy and development

**Options :**

- 485584135161. 1
- 485584135162. 2
- 485584135163. 3
- 485584135164. 4

**Question Number : 477 Question Id : 48558433792 Question Type : MCQ Option Shuffling : No Is Question Mandatory : No Calculator : None Response Time : N.A Think Time : N.A Minimum Instruction Time : 0**

**Correct Marks : 5 Wrong Marks : 1**

**Question Key Details :**

Key	Value
Comprehension	MCQ



The NGO, Mahila Samakhya, adopted an innovative method to communicate about the Panchayat Raj system to the women in villages.

1. Documentary
2. Speech
3. Phad
4. Focus group discussion

**Options :**

- 485584135165. 1
- 485584135166. 2
- 485584135167. 3
- 485584135168. 4

**Question Number : 478 Question Id : 48558433793 Question Type : MCQ Option Shuffling : No Is Question Mandatory : No Calculator : None Response Time : N.A Think Time : N.A Minimum Instruction Time : 0**

**Correct Marks : 5 Wrong Marks : 1**

**Question Key Details :**

Key	Value
Comprehension	MCQ

India has which kind of democracy?

1. Direct democracy
2. Representative democracy
3. Indirect democracy
4. Non-representative democracy

**Options :**

- 485584135169. 1
- 485584135170. 2
- 485584135171. 3
- 485584135172. 4

**Question Number : 479 Question Id : 48558433794 Question Type : MCQ Option Shuffling : No Is Question Mandatory : No Calculator : None Response Time : N.A Think Time : N.A Minimum Instruction Time : 0**

**Correct Marks : 5 Wrong Marks : 1**

**Question Key Details :**

Key	Value
Comprehension	MCQ

Opinions that are not fact based can be understood as

1. Prejudice
2. Untouchability
3. Inclusion
4. Exclusion

**Options :**

485584135173. 1  
485584135174. 2  
485584135175. 3  
485584135176. 4

**Question Number : 480 Question Id : 48558433795 Question Type : MCQ Option Shuffling : No Is Question Mandatory : No Calculator : None Response Time : N.A Think Time : N.A Minimum Instruction Time : 0**

**Correct Marks : 5 Wrong Marks : 1**

**Question Key Details :**

Key	Value
Comprehension	MCQ

Match the newspapers in List I with the language in List II

LIST I		LIST II	
A.	Kesari	I.	Malayali
B.	Mathrubhumi	II.	Hindi
C.	Sambad-Kaumudi	III.	Bengali
D.	Amar Ujala	IV.	Marathi

Choose the correct answer from the options given below:

1. A-I, B-II, C-III, D-IV
2. A-IV, B-I, C-III, D-II
3. A-IV, B-II, C-I, D-III
4. A-IV, B-II, C-III, D-I

**Options :**

485584135177. 1  
485584135178. 2  
485584135179. 3  
485584135180. 4

**Question Number : 481 Question Id : 48558433796 Question Type : MCQ Option Shuffling : No Is Question Mandatory : No Calculator : None Response Time : N.A Think Time : N.A Minimum Instruction Time : 0**

**Correct Marks : 5 Wrong Marks : 1**

**Question Key Details :**

Key	Value
Comprehension	MCQ

Why is Demographic Dividend considered temporary?

1. Larger pool of working age people will gradually turn into non-working old age group
2. Larger pool of non-working people will eventually turn into working people
3. Eventually the number of non-working people will be equal to that of working people
4. Larger pool of non-working people will be employed due to Government policies

**Options :**

- 485584135181. 1
- 485584135182. 2
- 485584135183. 3
- 485584135184. 4

**Question Number : 482 Question Id : 48558433797 Question Type : MCQ Option Shuffling : No Is Question Mandatory : No Calculator : None Response Time : N.A Think Time : N.A Minimum Instruction Time : 0**

**Correct Marks : 5 Wrong Marks : 1**

**Question Key Details :**

Key	Value
Comprehension	MCQ

Identify the three villages that were initially brought together to establish the trading post on river Hooghly by the English in 17th century.

1. Kolikata, Maidan, Fort William
2. Sutanuti, Gobindapur, Fort William
3. Sutanuti, Kolikata, Fort William
4. Kolikata, Sutanuti, Gobindapur

**Options :**

- 485584135185. 1
- 485584135186. 2
- 485584135187. 3
- 485584135188. 4

**Question Number : 483 Question Id : 48558433798 Question Type : MCQ Option Shuffling : No Is Question Mandatory : No Calculator : None Response Time : N.A Think Time : N.A Minimum Instruction Time : 0**

**Correct Marks : 5 Wrong Marks : 1**

**Question Key Details :**

Key	Value
Comprehension	MCQ

Who believed that famines are the result of "failure of entitlements"?

1. Karl Marx
2. Amartya Sen
3. Malthus
4. Emile Durkheim

**Options :**

- 485584135189. 1
- 485584135190. 2
- 485584135191. 3
- 485584135192. 4

**Question Number : 484 Question Id : 48558433799 Question Type : MCQ Option Shuffling : No Is Question Mandatory : No Calculator : None Response Time : N.A Think Time : N.A Minimum Instruction Time : 0**

**Correct Marks : 5 Wrong Marks : 1**

**Question Key Details :**

Key	Value
Comprehension	MCQ

When did Right to Information Act came into force?

1. October 13, 2005
2. October 13, 2006
3. June 15, 2005
4. June 15, 2006

**Options :**

- 485584135193. 1
- 485584135194. 2
- 485584135195. 3
- 485584135196. 4

**Question Number : 485 Question Id : 48558433800 Question Type : MCQ Option Shuffling : No Is Question Mandatory : No Calculator : None Response Time : N.A Think Time : N.A Minimum Instruction Time : 0**

**Correct Marks : 5 Wrong Marks : 1**

**Question Key Details :**

Key	Value
Comprehension	MCQ

Identify the key characteristic of social stratification from the list given below:

- A. It is social and not individual in character
- B. Social stratification persists through ideologies and practices
- C. It persists over generations
- D. It is natural
- E. It is not natural

Choose the correct answer from the options given below:

- 1. A, B, C only
- 2. B, C, E only
- 3. D, C, E only
- 4. A, D, E only

**Options :**

- 485584135197. 1
- 485584135198. 2
- 485584135199. 3
- 485584135200. 4

**Question Number : 486 Question Id : 48558433801 Question Type : MCQ Option Shuffling : No Is Question Mandatory : No Calculator : None Response Time : N.A Think Time : N.A Minimum Instruction Time : 0**

**Correct Marks : 5 Wrong Marks : 1**

**Question Key Details :**

Key	Value
Comprehension	MCQ

What does population pyramid show?

- 1. Age, Birth rate, Growth
- 2. Age, Gender, Growth
- 3. Age, Birth rate, Life expectancy
- 4. Birth rate, Gender, Life expectancy

**Options :**

- 485584135201. 1
- 485584135202. 2
- 485584135203. 3
- 485584135204. 4

**Question Number : 487 Question Id : 48558433802 Question Type : MCQ Option Shuffling : No Is Question Mandatory : No Calculator : None Response Time : N.A Think Time : N.A Minimum Instruction Time : 0**

**Correct Marks : 5 Wrong Marks : 1**

**Question Key Details :**

Key	Value
Comprehension	MCQ

Match the books in List I with the authors in List II

LIST I		LIST II	
A.	Stree Purush Tulana	I.	Daya Pawar
B.	The city	II.	Begum Rokeya
C.	Analogy of Religion	III.	Tarabai Shinde
D.	Sultana's Dream	IV.	Bishop Joseph Butler

Choose the correct answer from the options given below:

1. A-I, B-II, C-III, D-IV
2. A-IV, B-I, C-III, D-II
3. A-III, B-I, C-IV, D-II
4. A-IV, B-II, C-III, D-I

**Options :**

485584135205. 1  
485584135206. 2  
485584135207. 3  
485584135208. 4

**Question Number : 488 Question Id : 48558433803 Question Type : MCQ Option Shuffling : No Is Question Mandatory : No Calculator : None Response Time : N.A Think Time : N.A Minimum Instruction Time : 0**

**Correct Marks : 5 Wrong Marks : 1**

**Question Key Details :**

Key	Value
Comprehension	MCQ

The working age group considered for measuring dependency ratio is:

1. 15-64 years
2. 16-64 years
3. 18-70 years
4. 20-50 years

**Options :**

485584135209. 1  
485584135210. 2  
485584135211. 3  
485584135212. 4

**Question Number : 489 Question Id : 48558433804 Question Type : MCQ Option Shuffling : No Is Question Mandatory : No Calculator : None Response Time : N.A Think Time : N.A Minimum Instruction Time : 0**

**Correct Marks : 5 Wrong Marks : 1**

**Question Key Details :**

Key	Value
Comprehension	MCQ

In Madhopur village, 77 out of 298 households work and live in the cities of Bombay and Calcutta. What does the example reflect?

1. Industrialisation
2. Urbanisation
3. Migration
4. Ghettoization

**Options :**

- 485584135213. 1
- 485584135214. 2
- 485584135215. 3
- 485584135216. 4

**Question Number : 490 Question Id : 48558433805 Question Type : MCQ Option Shuffling : No Is Question Mandatory : No Calculator : None Response Time : N.A Think Time : N.A Minimum Instruction Time : 0**

**Correct Marks : 5 Wrong Marks : 1**

**Question Key Details :**

Key	Value
Comprehension	MCQ

Common features of caste system include

- A. equalities within the same caste members
- B. social mobility
- C. occupational link
- D. subdivisions
- E. hierarchical arrangements

Choose the correct answer from the options given below:

1. A, B, C, D only
2. A, B, D, E only
3. B, C, D, E only
4. A, C, D, E only

**Options :**

- 485584135217. 1
- 485584135218. 2
- 485584135219. 3
- 485584135220. 4

**Question Number : 491 Question Id : 48558433806 Question Type : MCQ Option Shuffling : No Is Question Mandatory : No Calculator : None Response Time : N.A Think Time : N.A Minimum Instruction Time : 0**

**Correct Marks : 5 Wrong Marks : 1**

**Question Key Details :**

Key	Value
Comprehension	MCQ

Match the concept in List I with the example in List II

LIST I Concept		LIST II Example	
A.	Weekly market	I.	Use of branded cars
B.	Status symbol	II.	BPO
C.	Commodification	III.	Dhorai
D.	Globalisation	IV.	Sale of kidney to rich patients

Choose the correct answer from the options given below:

1. A-III, B-II, C-I, D-IV
2. A-III, B-IV, C-II, D-I
3. A-III, B-I, C-IV, D-II
4. A-II, B-I, C-III, D-IV

**Options :**

485584135221. 1  
485584135222. 2  
485584135223. 3  
485584135224. 4

**Question Number : 492 Question Id : 48558433807 Question Type : MCQ Option Shuffling : No Is Question Mandatory : No Calculator : None Response Time : N.A Think Time : N.A Minimum Instruction Time : 0**

**Correct Marks : 5 Wrong Marks : 1**

**Question Key Details :**

Key	Value
Comprehension	MCQ

Arrange the states having lowest to highest child sex-ratio as per 2011 Census:

- A. Himachal Pradesh
- B. Kerala
- C. Bihar
- D. Haryana
- E. Rajasthan

Choose the correct answer from the options given below:

1. D, E, A, C, B
2. C, D, A, B, E
3. B, A, D, E, C
4. C, A, D, E, B

**Options :**

485584135225. 1  
485584135226. 2  
485584135227. 3



**Question Number : 493 Question Id : 48558433808 Question Type : MCQ Option Shuffling : No Is Question Mandatory : No Calculator : None Response Time : N.A Think Time : N.A Minimum Instruction Time : 0**

**Correct Marks : 5 Wrong Marks : 1**

**Question Key Details :**

Key	Value
Comprehension	MCQ

Arrange the following groups in an ascending order in terms of their percentage share in the Bidi industry:

- A. Manufacturer
- B. Worker
- C. Contractor
- D. Distributor

Choose the correct answer from the options given below:

- 1. A, C, B, D
- 2. B, C, D, A
- 3. A, B, C, D
- 4. B, D, C, A

**Options :**

- 485584135229. 1
- 485584135230. 2
- 485584135231. 3
- 485584135232. 4

**Question Number : 494 Question Id : 48558433809 Question Type : MCQ Option Shuffling : No Is Question Mandatory : No Calculator : None Response Time : N.A Think Time : N.A Minimum Instruction Time : 0**

**Correct Marks : 5 Wrong Marks : 1**

**Question Key Details :**

Key	Value
Comprehension	MCQ

For migrant workers Jan Breman has used the term:

- 1. Footloose labour
- 2. Loose labour
- 3. Mobile labour
- 4. Migratory labour

**Options :**

- 485584135233. 1
- 485584135234. 2
- 485584135235. 3
- 485584135236. 4

**Question Number : 495 Question Id : 48558433810 Question Type : MCQ Option Shuffling : No Is Question Mandatory : No Calculator : None Response Time : N.A Think Time : N.A Minimum Instruction Time : 0**

**Correct Marks : 5 Wrong Marks : 1**

**Question Key Details :**

Key	Value
Comprehension	MCQ

Identify the permanent traits of tribes from the list provided below:

- A. Language
- B. Mode of livelihood
- C. Region
- D. Extent of incorporation into Hindu society
- E. Physical characteristics

Choose the correct answer from the options given below:

- 1. A, C, E, only
- 2. B, D, E, only
- 3. A, B, C, only
- 4. B, C, E, only

**Options :**

- 485584135237. 1
- 485584135238. 2
- 485584135239. 3
- 485584135240. 4

**Question Number : 496 Question Id : 48558433811 Question Type : MCQ Option Shuffling : No Is Question Mandatory : No Calculator : None Response Time : N.A Think Time : N.A Minimum Instruction Time : 0**

**Correct Marks : 5 Wrong Marks : 1**

**Question Key Details :**

Key	Value
Comprehension	MCQ

Arrange the four-fold division of society into the varna system:

- A. Vaisya
- B. Brahmin
- C. Sudra
- D. Kshatriya

Choose the correct answer from the options given below:

- 1. B, D, A, C
- 2. B, A, C, D
- 3. A, B, C, D
- 4. C, B, D, A

**Options :**

485584135241. 1  
485584135242. 2  
485584135243. 3  
485584135244. 4

**Question Number : 497 Question Id : 48558433812 Question Type : MCQ Option Shuffling : No Is Question Mandatory : No Calculator : None Response Time : N.A Think Time : N.A Minimum Instruction Time : 0**

**Correct Marks : 5 Wrong Marks : 1**

**Question Key Details :**

Key	Value
Comprehension	MCQ

Impact of urbanization on peripheral villages:

- A. People build fashionable houses
- B. Pressure on resources
- C. Conflicts between migrants and villagers
- D. Out migration
- E. Uprooting villagers from their land

Choose the correct answer from the options given below:

- 1. A, C, D, E, only
- 2. A, B, C, D only
- 3. A, B, C, E only
- 4. B, C, D, E only

**Options :**

485584135245. 1  
485584135246. 2  
485584135247. 3  
485584135248. 4

**Question Number : 498 Question Id : 48558433813 Question Type : MCQ Option Shuffling : No Is Question Mandatory : No Calculator : None Response Time : N.A Think Time : N.A Minimum Instruction Time : 0**

**Correct Marks : 5 Wrong Marks : 1**

**Question Key Details :**

Key	Value
Comprehension	MCQ

The situation where people do not enjoy work and see it as something they have to do only for livelihood is described as:

- 1. Exploitation
- 2. Alienation
- 3. Marginalization
- 4. Discrimination

**Options :**

485584135249. 1  
485584135250. 2  
485584135251. 3  
485584135252. 4

**Question Number : 499 Question Id : 48558433814 Question Type : MCQ Option Shuffling : No Is Question Mandatory : No Calculator : None Response Time : N.A Think Time : N.A Minimum Instruction Time : 0**

**Correct Marks : 5 Wrong Marks : 1**

**Question Key Details :**

Key	Value
Comprehension	MCQ

From the choices given below choose the scheme associated with providing help to the farmers.

1. Beti bachao, Beti padhao
2. Green revolution
3. Pradhan Mantri Fasal Bima Yojana
4. Land Ceiling Act

**Options :**

485584135253. 1  
485584135254. 2  
485584135255. 3  
485584135256. 4

**Question Number : 500 Question Id : 48558433815 Question Type : MCQ Option Shuffling : No Is Question Mandatory : No Calculator : None Response Time : N.A Think Time : N.A Minimum Instruction Time : 0**

**Correct Marks : 5 Wrong Marks : 1**

**Question Key Details :**

Key	Value
Comprehension	MCQ

Match the concept in List I with the explanation in List II

LIST I Concept		LIST II Explanation	
A.	Preventive checks	I.	Number of females per 1000 males in a given area at a specified time period
B.	Positive checks	II.	Estimated number of years that an average person is expected to survive
C.	Life expectancy	III.	Voluntary action to reduce population (like postponing marriage)
D.	Sex-ratio	IV.	Involuntary events to reduce population (like famine)

Choose the correct answer from the options given below:

1. A-IV, B-III, C-II, D-I
2. A-III, B-IV, C-II, D-I
3. A-IV, B-II, C-III, D-I
4. A-I, B-II, C-III, D-IV

**Options :**

485584135257. 1  
 485584135258. 2  
 485584135259. 3  
 485584135260. 4

**Question Number : 501 Question Id : 48558433816 Question Type : MCQ Option Shuffling : No Is Question Mandatory : No Calculator : None Response Time : N.A Think Time : N.A Minimum Instruction Time : 0**

**Correct Marks : 5 Wrong Marks : 1**

**Question Key Details :**

Key	Value
Comprehension	MCQ

The work culture where workers work for extended hours beyond the regular time either to complete the project or please the boss is called:

1. Flexi-time
2. Night out
3. Time slavery
4. Work pressure

**Options :**

485584135261. 1  
 485584135262. 2  
 485584135263. 3  
 485584135264. 4

Question Number : 502 Question Id : 48558433817 Question Type : MCQ Option Shuffling : No Is Question Mandatory : No Calculator : None Response Time : N.A Think Time : N.A Minimum Instruction Time : 0

Correct Marks : 5 Wrong Marks : 1

Question Key Details :

Key	Value
Comprehension	MCQ

Recent developments in Varanasi and its promotion in media made the city an attractive tourist spot. With which theory can this example be associated with?

1. Corporate culture
2. Culture of consumption
3. Globalization of culture
4. Conscious consumption

Options :

- 485584135265. 1
- 485584135266. 2
- 485584135267. 3
- 485584135268. 4

Question Number : 503 Question Id : 48558433818 Question Type : MCQ Option Shuffling : No Is Question Mandatory : No Calculator : None Response Time : N.A Think Time : N.A Minimum Instruction Time : 0

Correct Marks : 5 Wrong Marks : 1

Question Key Details :

Key	Value
Comprehension	MCQ

Arrange in a chronological manner from earliest to latest developments:

- A. SRC mandated redrawing of the map of India on linguistic lines
- B. Many feared that states based on language will hasten further division of India
- C. Indian National Congress was constituted on linguistic lines
- D. India became independent but was partitioned along religious lines
- E. Creation of Andhra Pradesh after the death of Potti Sriramulu

Choose the correct answer from the options given below:

1. C, D, B, E, A
2. A, B, D, C, B
3. A, B, D, C, E
4. D, C, B, A, E

Options :

- 485584135269. 1
- 485584135270. 2
- 485584135271. 3
- 485584135272. 4

Question Number : 504 Question Id : 48558433819 Question Type : MCQ Option Shuffling : No Is Question Mandatory : No Calculator : None Response Time : N.A Think Time : N.A Minimum Instruction Time : 0

Correct Marks : 5 Wrong Marks : 1

Question Key Details :

Key	Value
Comprehension	MCQ

A movement that is aimed in bringing change in the personal consciousness and actions of individual members is called:

1. Reformist social movement
2. Revolutionary social movement
3. Historical social movement
4. Redemptive social movement

Options :

- 485584135273. 1
- 485584135274. 2
- 485584135275. 3
- 485584135276. 4

Question Number : 505 Question Id : 48558433820 Question Type : MCQ Option Shuffling : No Is Question Mandatory : No Calculator : None Response Time : N.A Think Time : N.A Minimum Instruction Time : 0

Correct Marks : 5 Wrong Marks : 1

Question Key Details :

Key	Value
Comprehension	MCQ

Match the laws in List I with the year adopted in List II

LIST I Laws/Acts		LIST II Year of Adoption/Passing	
A.	Caste Disabilities Removal Act	I.	1989
B.	Constitution Amendment (93rd) Act	II.	1950
C.	(Article 17) Abolishing of Untouchability	III.	1850
D.	Prevention of Atrocities Act	IV.	2006

Choose the correct answer from the options given below:

1. A-I, B-II, C-III, D-IV
2. A-IV, B-III, C-II, D-I
3. A-III, B-IV, C-II, D-I
4. A-IV, B-II, C-I, D-III

Options :

- 485584135277. 1

485584135278. 2  
485584135279. 3  
485584135280. 4

**Question Number : 506 Question Id : 48558433821 Question Type : MCQ Option Shuffling : No Is Question Mandatory : No Calculator : None Response Time : N.A Think Time : N.A Minimum Instruction Time : 0**

**Correct Marks : 5 Wrong Marks : 1**

**Question Key Details :**

Key	Value
Comprehension	MCQ

The floods caused by the unusually heavy monsoon in the Alaknanda valley marked a turning point in the ecological history of the region. What is being referred to here?

1. Budhan movement
2. Chipko movement
3. Swacch Bharat Mission
4. Namami Gange Project

**Options :**

485584135281. 1  
485584135282. 2  
485584135283. 3  
485584135284. 4

**Question Number : 507 Question Id : 48558433822 Question Type : MCQ Option Shuffling : No Is Question Mandatory : No Calculator : None Response Time : N.A Think Time : N.A Minimum Instruction Time : 0**

**Correct Marks : 5 Wrong Marks : 1**

**Question Key Details :**

Key	Value
Comprehension	MCQ

Who is associated with the anti-caste movement in 19th century?

1. Mahatma Gandhi
2. Jyotiba Phule
3. Raja Rammohan Roy
4. Birsa Munda

**Options :**

485584135285. 1  
485584135286. 2  
485584135287. 3  
485584135288. 4

**Question Number : 508 Question Id : 48558433823 Question Type : MCQ Option Shuffling : No Is Question Mandatory : No Calculator : None Response Time : N.A Think Time : N.A Minimum Instruction Time : 0**

**Correct Marks : 5 Wrong Marks : 1**

**Question Key Details :**



Key	Value
Comprehension	MCQ

Arrange the following newspapers in order of their year of publication from the earliest to the latest.

- A. The Madras Mail
- B. The Statesman
- C. The Times of India
- D. The Pioneer
- E. The Civil and Military Gazettee

Choose the correct answer from the options given below:

1. C, D, A, B, E
2. B, D, C, A, E
3. A, B, E, D, C
4. A, C, B, E, D

**Options :**

485584135289. 1  
485584135290. 2  
485584135291. 3  
485584135292. 4

**Question Number : 509 Question Id : 48558433824 Question Type : MCQ Option Shuffling : No Is Question Mandatory : No Calculator : None Response Time : N.A Think Time : N.A Minimum Instruction Time : 0 Correct Marks : 5 Wrong Marks : 1**

**Question Key Details :**

Key	Value
Comprehension	MCQ

One of the key issues that bind the tribal movement across India.

1. Over exploitation
2. Language
3. Alienation from forest lands
4. Ethnicity

**Options :**

485584135293. 1  
485584135294. 2  
485584135295. 3  
485584135296. 4

**Question Number : 510 Question Id : 48558433825 Question Type : MCQ Option Shuffling : No Is Question Mandatory : No Calculator : None Response Time : N.A Think Time : N.A Minimum Instruction Time : 0 Correct Marks : 5 Wrong Marks : 1**

**Question Key Details :**

Key	Value
-----	-------

What was the common demand among the jute workers of Kolkata, cotton mill workers of Buckingham and Ahmedabad?

1. Better working conditions
2. 25% increase of wages
3. 50% increase of wages
4. Less working hours

**Options :**

485584135297. 1

485584135298. 2

485584135299. 3

485584135300. 4

**Sub-Section Number :**

2

**Sub-Section Id :**

4855842446

**Question Shuffling Allowed :**

No

**Is Section Default? :**

null

**Question Number : 511 Question Id : 48558433826 Question Type : MCQ Option Shuffling : No Is Question Mandatory : No Calculator : None Response Time : N.A Think Time : N.A Minimum Instruction Time : 0**

**Correct Marks : 5 Wrong Marks : 1**

**Question Key Details :**

Key	Value
Comprehension	Comp1

Read the passage and answer the questions:

Regionalism in India is rooted in India's diversity of languages, cultures, tribes and religions. It is also encouraged by the geographical concentration of these identity workers in particular regions and fuelled by a sense of regional deprivation. Indian federalism has been a means of accommodating these regional sentiments.

After independence, initially the Indian state continued with the British-Indian arrangement, dividing India into large provinces, also called 'Presidencies'. These were large multi-ethnic and multilingual provincial states constituting the major political-administrative units of a semi-federal state called the Union of India. Languages coupled with regional and tribal identity and not religion has therefore provided the most powerful instrument for the formation of ethno-rational identity in India.

The three major factors for the formation of ethno-rational identity in India are:

1. Linguistic, tribal and religious identity
2. Linguistic, caste and tribal identity
3. Regional, linguistic and tribal identity
4. Religious, linguistic and caste identity

**Options :**

485584135301. 1  
485584135302. 2  
485584135303. 3  
485584135304. 4

**Question Number : 512 Question Id : 48558433827 Question Type : MCQ Option Shuffling : No Is Question Mandatory : No Calculator : None Response Time : N.A Think Time : N.A Minimum Instruction Time : 0**

**Correct Marks : 5 Wrong Marks : 1**

**Question Key Details :**

Key	Value
Comprehension	Comp1

Read the passage and answer the questions:

Regionalism in India is rooted in India's diversity of languages, cultures, tribes and religions. It is also encouraged by the geographical concentration of these identity workers in particular regions and fuelled by a sense of regional deprivation. Indian federalism has been a means of accommodating these regional sentiments.

After independence, initially the Indian state continued with the British-Indian arrangement, dividing India into large provinces, also called 'Presidencies'. These were large multi-ethnic and multilingual provincial states constituting the major political-administrative units of a semi-federal state called the Union of India. Languages coupled with regional and tribal identity and not religion has therefore provided the most powerful instrument for the formation of ethno-rational identity in India.

Which of the following cultural markers is not responsible for regionalism in India?

1. Tribe
2. Caste
3. Religion
4. Language

**Options :**

485584135305. 1  
485584135306. 2  
485584135307. 3  
485584135308. 4

**Question Number : 513 Question Id : 48558433828 Question Type : MCQ Option Shuffling : No Is Question Mandatory : No Calculator : None Response Time : N.A Think Time : N.A Minimum Instruction Time : 0**

**Correct Marks : 5 Wrong Marks : 1**

**Question Key Details :**

Key	Value
Comprehension	Comp1

Read the passage and answer the questions:

Regionalism in India is rooted in India's diversity of languages, cultures, tribes and religions. It is also encouraged by the geographical concentration of these identity workers in particular regions and fuelled by a sense of regional deprivation. Indian federalism has been a means of accommodating these regional sentiments.

After independence, initially the Indian state continued with the British-Indian arrangement, dividing India into large provinces, also called 'Presidencies'. These were large multi-ethnic and multilingual provincial states constituting the major political-administrative units of a semi-federal state called the Union of India. Languages coupled with regional and tribal identity and not religion has therefore provided the most powerful instrument for the formation of ethno-rational identity in India.

During British period, India was divided into large provinces called

1. Principalities
2. State
3. Princely states
4. Presidencies

**Options :**

- 485584135309. 1
- 485584135310. 2
- 485584135311. 3
- 485584135312. 4

**Question Number : 514 Question Id : 48558433829 Question Type : MCQ Option Shuffling : No Is Question Mandatory : No Calculator : None Response Time : N.A Think Time : N.A Minimum Instruction Time : 0**

**Correct Marks : 5 Wrong Marks : 1**

**Question Key Details :**

Key	Value
Comprehension	Compl

Read the passage and answer the questions:

Regionalism in India is rooted in India's diversity of languages, cultures, tribes and religions. It is also encouraged by the geographical concentration of these identity workers in particular regions and fuelled by a sense of regional deprivation. Indian federalism has been a means of accommodating these regional sentiments.

After independence, initially the Indian state continued with the British-Indian arrangement, dividing India into large provinces, also called 'Presidencies'. These were large multi-ethnic and multilingual provincial states constituting the major political-administrative units of a semi-federal state called the Union of India. Languages coupled with regional and tribal identity and not religion has therefore provided the most powerful instrument for the formation of ethno-rational identity in India.

The term used for addressing the existence of diversity of languages is

1. Multi-lingual
2. Multicultural
3. Multi-ethnic
4. Mono-lingual

**Options :**

485584135313. 1  
485584135314. 2  
485584135315. 3  
485584135316. 4

**Question Number : 515 Question Id : 48558433830 Question Type : MCQ Option Shuffling : No Is Question Mandatory : No Calculator : None Response Time : N.A Think Time : N.A Minimum Instruction Time : 0**

**Correct Marks : 5 Wrong Marks : 1**

**Question Key Details :**

Key	Value
Comprehension	Comp1

Read the passage and answer the questions:

Regionalism in India is rooted in India's diversity of languages, cultures, tribes and religions. It is also encouraged by the geographical concentration of these identity workers in particular regions and fuelled by a sense of regional deprivation. Indian federalism has been a means of accommodating these regional sentiments.

After independence, initially the Indian state continued with the British-Indian arrangement, dividing India into large provinces, also called 'Presidencies'. These were large multi-ethnic and multilingual provincial states constituting the major political-administrative units of a semi-federal state called the Union of India. Languages coupled with regional and tribal identity and not religion has therefore provided the most powerful instrument for the formation of ethno-rational identity in India.

For the growth of regionalism, the prerequisite is

1. Sense of being dominant
2. Sense of deprivation
3. Sense of empowerment
4. Sense of advancement

**Options :**

485584135317. 1  
485584135318. 2  
485584135319. 3  
485584135320. 4

**Sub-Section Number :**

3

**Sub-Section Id :**

4855842447

Question Shuffling Allowed :

No

Is Section Default? :

null

Question Number : 516 Question Id : 48558433831 Question Type : MCQ Option Shuffling : No Is Question Mandatory : No Calculator : None Response Time : N.A Think Time : N.A Minimum Instruction Time : 0

Correct Marks : 5 Wrong Marks : 1

Question Key Details :

Key	Value
Comprehension	Comp2

Read the passage and answer the following questions:

These are indicators of the process of globalisation of agriculture, or the incorporation of agriculture into the larger global market - a process that has had direct effects on farmers and rural society. For instance, in some regions such as Punjab and Karnataka, farmers enter into contracts with multinational companies (such as PepsiCo) to grow certain crops (such as tomatoes and potatoes), which the companies then buy from them for processing or export. In such 'contract farming' systems, the company identifies the crops to be grown, provides the seeds and other inputs, as well as the knowhow and often also the working capital. In return, the farmer is assured of a market because the company guarantees that it will purchase the produce at a predetermined fixed price. Contract farming is very common now in the production of specialised items such as cut flowers, fruits such as grapes, figs and pomegranates, cotton and oil seeds. While contract farming appears to provide financial security to farmers, it can also lead to greater insecurity as farmers become dependent on these companies for their livelihoods. Contract farming of export-oriented products such as flowers and gherkins also means that agricultural land is diverted from food grain production. Contract farming has sociological significance in that it disengages many people from the production process and makes their own indigenous knowledge of agriculture irrelevant. In addition, contract farming caters primarily to the production of elite items, and because it usually requires high doses of fertilisers and pesticides, it is often not ecologically sustainable.

Contract farming happens for:

1. Cash crops only
2. Food crops only
3. Oil seeds and cotton
4. Food processing industry

Options :

485584135321. 1

485584135322. 2

485584135323. 3

485584135324. 4

Question Number : 517 Question Id : 48558433832 Question Type : MCQ Option Shuffling : No Is Question Mandatory : No Calculator : None Response Time : N.A Think Time : N.A Minimum Instruction Time : 0

Correct Marks : 5 Wrong Marks : 1

Question Key Details :

Key	Value
Comprehension	Comp2

Read the passage and answer the following questions:

These are indicators of the process of globalisation of agriculture, or the incorporation of agriculture into the larger global market - a process that has had direct effects on farmers and rural society. For instance, in some regions such as Punjab and Karnataka, farmers enter into contracts with multinational companies (such as PepsiCo) to grow certain crops (such as tomatoes and potatoes), which the companies then buy from them for processing or export. In such 'contract farming' systems, the company identifies the crops to be grown, provides the seeds and other inputs, as well as the knowhow and often also the working capital. In return, the farmer is assured of a market because the company guarantees that it will purchase the produce at a predetermined fixed price. Contract farming is very common now in the production of specialised items such as cut flowers, fruits such as grapes, figs and pomegranates, cotton and oil seeds. While contract farming appears to provide financial security to farmers, it can also lead to greater insecurity as farmers become dependent on these companies for their livelihoods. Contract farming of export-oriented products such as flowers and gherkins also means that agricultural land is diverted from food grain production. Contract farming has sociological significance in that it disengages many people from the production process and makes their own indigenous knowledge of agriculture irrelevant. In addition, contract farming caters primarily to the production of elite items, and because it usually requires high doses of fertilisers and pesticides, it is often not ecologically sustainable.

The change in the nature of relationship between landlords and agricultural workers has been described by the sociologist Jan Brewman as:

1. shift from patronage to exploitation
2. shift from ownership to tenancy
3. withdrawal from subsistence farming
4. withdrawal from agriculture

**Options :**

- 485584135325. 1
- 485584135326. 2
- 485584135327. 3
- 485584135328. 4

**Question Number : 518 Question Id : 48558433833 Question Type : MCQ Option Shuffling : No Is Question Mandatory : No Calculator : None Response Time : N.A Think Time : N.A Minimum Instruction Time : 0**

**Correct Marks : 5 Wrong Marks : 1**

**Question Key Details :**

Key	Value
Comprehension	Comp2

Read the passage and answer the following questions:

These are indicators of the process of globalisation of agriculture, or the incorporation of agriculture into the larger global market - a process that has had direct effects on farmers and rural society. For instance, in some regions such as Punjab and Karnataka, farmers enter into contracts with multinational companies (such as PepsiCo) to grow certain crops (such as tomatoes and potatoes), which the companies then buy from them for processing or export. In such 'contract farming' systems, the company identifies the crops to be grown, provides the seeds and other inputs, as well as the knowhow and often also the working capital. In return, the farmer is assured of a market because the company guarantees that it will purchase the produce at a predetermined fixed price. Contract farming is very common now in the production of specialised items such as cut flowers, fruits such as grapes, figs and pomegranates, cotton and oil seeds. While contract farming appears to provide financial security to farmers, it can also lead to greater insecurity as farmers become dependent on these companies for their livelihoods. Contract farming of export-oriented products such as flowers and gherkins also means that agricultural land is diverted from food grain production. Contract farming has sociological significance in that it disengages many people from the production process and makes their own indigenous knowledge of agriculture irrelevant. In addition, contract farming caters primarily to the production of elite items, and because it usually requires high doses of fertilisers and pesticides, it is often not ecologically sustainable.

Who decides the crop to be grown under contract farming?

1. Farmer
2. Tenants
3. Labourer
4. Company

**Options :**

485584135329. 1  
485584135330. 2  
485584135331. 3  
485584135332. 4

**Question Number : 519 Question Id : 48558433834 Question Type : MCQ Option Shuffling : No Is Question Mandatory : No Calculator : None Response Time : N.A Think Time : N.A Minimum Instruction Time : 0**

**Correct Marks : 5 Wrong Marks : 1**

**Question Key Details :**

Key	Value
Comprehension	Comp2



Read the passage and answer the following questions:

These are indicators of the process of globalisation of agriculture, or the incorporation of agriculture into the larger global market - a process that has had direct effects on farmers and rural society. For instance, in some regions such as Punjab and Karnataka, farmers enter into contracts with multinational companies (such as PepsiCo) to grow certain crops (such as tomatoes and potatoes), which the companies then buy from them for processing or export. In such 'contract farming' systems, the company identifies the crops to be grown, provides the seeds and other inputs, as well as the knowhow and often also the working capital. In return, the farmer is assured of a market because the company guarantees that it will purchase the produce at a predetermined fixed price. Contract farming is very common now in the production of specialised items such as cut flowers, fruits such as grapes, figs and pomegranates, cotton and oil seeds. While contract farming appears to provide financial security to farmers, it can also lead to greater insecurity as farmers become dependent on these companies for their livelihoods. Contract farming of export-oriented products such as flowers and gherkins also means that agricultural land is diverted from food grain production. Contract farming has sociological significance in that it disengages many people from the production process and makes their own indigenous knowledge of agriculture irrelevant. In addition, contract farming caters primarily to the production of elite items, and because it usually requires high doses of fertilisers and pesticides, it is often not ecologically sustainable.

Out of the following, which is not a demerit of contract farming?

1. Provides financial security to the farmer
2. Indigenous knowledge becomes irrelevant regarding agriculture
3. Ecologically not sustainable
4. Does not produce for the masses

**Options :**

- 485584135333. 1
- 485584135334. 2
- 485584135335. 3
- 485584135336. 4

**Question Number : 520 Question Id : 48558433835 Question Type : MCQ Option Shuffling : No Is Question Mandatory : No Calculator : None Response Time : N.A Think Time : N.A Minimum Instruction Time : 0**

**Correct Marks : 5 Wrong Marks : 1**

**Question Key Details :**

Key	Value
Comprehension	Comp2

Read the passage and answer the following questions:

These are indicators of the process of globalisation of agriculture, or the incorporation of agriculture into the larger global market - a process that has had direct effects on farmers and rural society. For instance, in some regions such as Punjab and Karnataka, farmers enter into contracts with multinational companies (such as PepsiCo) to grow certain crops (such as tomatoes and potatoes), which the companies then buy from them for processing or export. In such 'contract farming' systems, the company identifies the crops to be grown, provides the seeds and other inputs, as well as the knowhow and often also the working capital. In return, the farmer is assured of a market because the company guarantees that it will purchase the produce at a predetermined fixed price. Contract farming is very common now in the production of specialised items such as cut flowers, fruits such as grapes, figs and pomegranates, cotton and oil seeds. While contract farming appears to provide financial security to farmers, it can also lead to greater insecurity as farmers become dependent on these companies for their livelihoods. Contract farming of export-oriented products such as flowers and gherkins also means that agricultural land is diverted from food grain production. Contract farming has sociological significance in that it disengages many people from the production process and makes their own indigenous knowledge of agriculture irrelevant. In addition, contract farming caters primarily to the production of elite items, and because it usually requires high doses of fertilisers and pesticides, it is often not ecologically sustainable.

The system described in the passage is possible due to which process?

1. Globalisation
2. Contract farming
3. Trans National Corporation
4. Glocalisation

**Options :**

485584135337. 1  
485584135338. 2  
485584135339. 3  
485584135340. 4

## General Test

<b>Group Number :</b>	13
<b>Group Id :</b>	485584751
<b>Group Maximum Duration :</b>	60
<b>Group Minimum Duration :</b>	60
<b>Show Attended Group? :</b>	No
<b>Edit Attended Group? :</b>	No
<b>Break time :</b>	0
<b>Group Marks :</b>	250
<b>Is this Group for Examiner? :</b>	No
<b>Examiner permission :</b>	Can't View
<b>Show Progress Bar? :</b>	No

## General Test

**Section Id :** 485584869  
**Section Number :** 1  
**Section type :** Online  
**Mandatory or Optional :** Mandatory  
**Number of Questions :** 60  
**Number of Questions to be attempted :** 50  
**Section Marks :** 250  
**Enable Mark as Answered Mark for Review and Clear Response :** Yes  
**Maximum Instruction Time :** 0  
**Sub-Section Number :** 1  
**Sub-Section Id :** 4855842448  
**Question Shuffling Allowed :** Yes  
**Is Section Default? :** null

**Question Number : 521 Question Id : 48558433886 Question Type : MCQ Option Shuffling : No Is Question Mandatory : No Calculator : None Response Time : N.A Think Time : N.A Minimum Instruction Time : 0**

**Correct Marks : 5 Wrong Marks : 1**

**Question Key Details :**

Key	Value
Comprehension	MCQ

The C.P. of two shirts taken together is ₹910. If by selling one at a profit of 16% and the other at a loss of 12%, there is no loss or gain in the whole transaction, then the C.P. of the two shirts are respectively:

1. 380, 530

2. 370, 540

3. 390, 520

4. 400, 510

**Options :**

485584135541. 1

485584135542. 2

485584135543. 3

485584135544. 4

**Question Number : 522 Question Id : 48558433887 Question Type : MCQ Option Shuffling : No Is Question Mandatory : No Calculator : None Response Time : N.A Think Time : N.A Minimum Instruction Time : 0**

**Correct Marks : 5 Wrong Marks : 1**

**Question Key Details :**

Key	Value
Comprehension	MCQ

Heera purchased a bag for ₹4500 and sold it for ₹8,200. What is the profit percentage? (Correct to two places of decimal)

1. 82.22

2. 73.62

3. 45.12

4. 52.42

**Options :**

485584135545. 1

485584135546. 2

485584135547. 3

485584135548. 4

**Question Number : 523 Question Id : 48558433888 Question Type : MCQ Option Shuffling : No Is Question Mandatory : No Calculator : None Response Time : N.A Think Time : N.A Minimum Instruction Time : 0**

**Correct Marks : 5 Wrong Marks : 1**

**Question Key Details :**

Key	Value
Comprehension	MCQ

What is the value of  ${}^{81}P_2 - {}^{81}C_2$  ?

1. 6480

2. 3240

3. 2775

4. 5040

**Options :**

485584135549. 1

485584135550. 2

485584135551. 3

485584135552. 4

**Question Number : 524 Question Id : 48558433889 Question Type : MCQ Option Shuffling : No Is Question Mandatory : No Calculator : None Response Time : N.A Think Time : N.A Minimum Instruction Time : 0**

**Correct Marks : 5 Wrong Marks : 1**

**Question Key Details :**

Key	Value
Comprehension	MCQ

If  ${}^nC_9 = {}^nC_3$ , what is  $n$  ?

1. 10

2. 11

3. 12

4. 13

**Options :**

485584135553. 1

485584135554. 2

485584135555. 3

485584135556. 4

**Question Number : 525 Question Id : 48558433890 Question Type : MCQ Option Shuffling : No Is Question Mandatory : No Calculator : None Response Time : N.A Think Time : N.A Minimum Instruction Time : 0**

**Correct Marks : 5 Wrong Marks : 1**

**Question Key Details :**

Key	Value
Comprehension	MCQ

The Curved Surface Area of a right circular cylinder of base radius  $r$  is obtained by multiplying its volume:

1.  $2r^2$

2.  $\frac{2}{r^2}$

3.  $2r$

4.  $\frac{2}{r}$

**Options :**

485584135557. 1

485584135558. 2

485584135559. 3

485584135560. 4

**Question Number : 526 Question Id : 48558433891 Question Type : MCQ Option Shuffling : No Is Question Mandatory : No Calculator : None Response Time : N.A Think Time : N.A Minimum Instruction Time : 0**

**Correct Marks : 5 Wrong Marks : 1**

**Question Key Details :**

Key	Value
Comprehension	MCQ

Match List I with List II

LIST I		LIST II	
A.	Volume of cone	I.	$\frac{1}{3}\pi h(r_1^2 + r_2^2 + r_1r_2)$
B.	Volume of sphere	II.	$\frac{4}{3}\pi r^3$
C.	Volume of Frustum	III.	$\frac{1}{3}\pi r^2 h$
D.	Volume of cylinder	IV.	$\pi r^2 h$

Choose the correct answer from the options given below:

1. A-IV, B-I, C-III, D-II
2. A-III, B-IV, C-II, D-I
3. A-I, B-II, C-III, D-IV
4. A-II, B-IV, C-I, D-III

**Options :**

485584135561. 1  
485584135562. 2  
485584135563. 3  
485584135564. 4

**Question Number : 527 Question Id : 48558433892 Question Type : MCQ Option Shuffling : No Is Question Mandatory : No Calculator : None Response Time : N.A Think Time : N.A Minimum Instruction Time : 0**

**Correct Marks : 5 Wrong Marks : 1**

**Question Key Details :**

Key	Value
Comprehension	MCQ

A sum of money triples itself in 3 years at simple interest. In how many years will it become 9 times of itself?

1. 9 years
2. 10 years
3. 12 years
4. 8 years

**Options :**

485584135565. 1  
485584135566. 2  
485584135567. 3  
485584135568. 4

**Question Number : 528 Question Id : 48558433893 Question Type : MCQ Option Shuffling : No Is Question Mandatory : No Calculator : None Response Time : N.A Think Time : N.A Minimum Instruction Time : 0**

Correct Marks : 5 Wrong Marks : 1

Question Key Details :

Key	Value
Comprehension	MCQ

At what rate of simple interest, a sum of ₹1,800 will become ₹2,700 in 10 years?

1. 10%
2. 6%
3. 6.75%
4. 5%

Options :

485584135569. 1  
485584135570. 2  
485584135571. 3  
485584135572. 4

Question Number : 529 Question Id : 48558433894 Question Type : MCQ Option Shuffling : No Is Question Mandatory : No Calculator : None Response Time : N.A Think Time : N.A Minimum Instruction Time : 0

Correct Marks : 5 Wrong Marks : 1

Question Key Details :

Key	Value
Comprehension	MCQ

Where does the point P (-5, 0) lies?

1. Third quadrant
2. y-axis
3. x-axis
4. Fourth quadrant

Options :

485584135573. 1  
485584135574. 2  
485584135575. 3  
485584135576. 4

Question Number : 530 Question Id : 48558433895 Question Type : MCQ Option Shuffling : No Is Question Mandatory : No Calculator : None Response Time : N.A Think Time : N.A Minimum Instruction Time : 0

Correct Marks : 5 Wrong Marks : 1

Question Key Details :

Key	Value
Comprehension	MCQ

If P, R, T are the areas of parallelogram, a rhombus and a triangle standing on the same base and between the same parallel lines, then which of the following is true?

1.  $R < P < T$
2.  $P > R > T$
3.  $R = P = T$
4.  $R = P = 2T$

**Options :**

485584135577. 1  
485584135578. 2  
485584135579. 3  
485584135580. 4

**Question Number : 531 Question Id : 48558433896 Question Type : MCQ Option Shuffling : No Is Question Mandatory : No Calculator : None Response Time : N.A Think Time : N.A Minimum Instruction Time : 0**

**Correct Marks : 5 Wrong Marks : 1**

**Question Key Details :**

Key	Value
Comprehension	MCQ

Given expression:

$$\frac{(0.682)^2 - (0.318)^2}{0.682 - 0.318}$$

1. 2
2. 4
3. 1
4. 5

**Options :**

485584135581. 1  
485584135582. 2  
485584135583. 3  
485584135584. 4

**Question Number : 532 Question Id : 48558433897 Question Type : MCQ Option Shuffling : No Is Question Mandatory : No Calculator : None Response Time : N.A Think Time : N.A Minimum Instruction Time : 0**

**Correct Marks : 5 Wrong Marks : 1**

**Question Key Details :**

Key	Value
Comprehension	MCQ



A man goes uphill with an average speed of 24 km/h and comes down with an average speed of 36 km/h. The distance travelled in both cases being the same. The average speed for the entire journey is:

1. 30 km/h
2. 28.8 km/h
3. 32 km/h
4. 45 km/h

**Options :**

485584135585. 1  
485584135586. 2  
485584135587. 3  
485584135588. 4

**Question Number : 533 Question Id : 48558433898 Question Type : MCQ Option Shuffling : No Is Question Mandatory : No Calculator : None Response Time : N.A Think Time : N.A Minimum Instruction Time : 0**

**Correct Marks : 5 Wrong Marks : 1**

**Question Key Details :**

Key	Value
Comprehension	MCQ

A 300 m long train is moving at a speed of 60 km/h. In what time will it cross a single pole?

1. 25 sec
2. 30 sec
3. 18 sec
4. 12 sec

**Options :**

485584135589. 1  
485584135590. 2  
485584135591. 3  
485584135592. 4

**Question Number : 534 Question Id : 48558433899 Question Type : MCQ Option Shuffling : No Is Question Mandatory : No Calculator : None Response Time : N.A Think Time : N.A Minimum Instruction Time : 0**

**Correct Marks : 5 Wrong Marks : 1**

**Question Key Details :**

Key	Value
Comprehension	MCQ

In a polyhedron, the number of faces is 4 and the number of edges is 6, then the number of vertices of that polyhedron is:

1. 1
2. 2
3. 3
4. 4

**Options :**

485584135593. 1  
485584135594. 2  
485584135595. 3  
485584135596. 4

**Question Number : 535 Question Id : 48558433900 Question Type : MCQ Option Shuffling : No Is Question Mandatory : No Calculator : None Response Time : N.A Think Time : N.A Minimum Instruction Time : 0**

**Correct Marks : 5 Wrong Marks : 1**

**Question Key Details :**

Key	Value
Comprehension	MCQ

The number  $0.\overline{423}$  converted to a fraction, then it is equal to:

1.  $\frac{1147}{300}$
2.  $\frac{419}{900}$
3.  $\frac{419}{990}$
4.  $\frac{423}{100}$

**Options :**

485584135597. 1  
485584135598. 2  
485584135599. 3  
485584135600. 4

**Question Number : 536 Question Id : 48558433901 Question Type : MCQ Option Shuffling : No Is Question Mandatory : No Calculator : None Response Time : N.A Think Time : N.A Minimum Instruction Time : 0**

**Correct Marks : 5 Wrong Marks : 1**

**Question Key Details :**

Key	Value
Comprehension	MCQ

Which of the following is called 'Trapezium'?

1. All the sides are equal
2. Two opposite parallel sides are equal
3. Two opposite sides are parallel and two opposite sides are non-parallel
4. A pair of adjacent sides are equal

**Options :**

485584135601. 1

485584135602. 2

485584135603. 3

485584135604. 4

**Question Number : 537 Question Id : 48558433902 Question Type : MCQ Option Shuffling : No Is Question Mandatory : No Calculator : None Response Time : N.A Think Time : N.A Minimum Instruction Time : 0**

**Correct Marks : 5 Wrong Marks : 1**

**Question Key Details :**

Key	Value
Comprehension	MCQ

From a well shuffled pack of 52 cards, three cards are drawn one by one. The probability that the three cards are Jack, Queen and King respectively?

1.  $\frac{11}{1105}$

2.  $\frac{8}{16575}$

3.  $\frac{27}{2197}$

4.  $\frac{27}{305}$

**Options :**

485584135605. 1

485584135606. 2

485584135607. 3

485584135608. 4

**Question Number : 538 Question Id : 48558433903 Question Type : MCQ Option Shuffling : No Is Question Mandatory : No Calculator : None Response Time : N.A Think Time : N.A Minimum Instruction Time : 0**

**Correct Marks : 5 Wrong Marks : 1**

**Question Key Details :**

Key	Value
Comprehension	MCQ

Two unbiased coins are tossed. What is the probability of getting one head and one tail?

1.  $\frac{1}{2}$

2.  $\frac{1}{3}$

3.  $\frac{1}{4}$

4. 1

**Options :**

485584135609. 1

485584135610. 2

485584135611. 3

485584135612. 4

**Question Number : 539 Question Id : 48558433904 Question Type : MCQ Option Shuffling : No Is Question Mandatory : No Calculator : None Response Time : N.A Think Time : N.A Minimum Instruction Time : 0**

**Correct Marks : 5 Wrong Marks : 1**

**Question Key Details :**

Key	Value
Comprehension	MCQ

If the manufacturer gains 10%, the wholesale dealer gains 15% and the retailer gains 25%, then find the cost of production of a table, if the retail price of which is ₹1265?

1. ₹1000

2. ₹900

3. ₹800

4. ₹700

**Options :**

485584135613. 1

485584135614. 2

485584135615. 3

485584135616. 4

**Question Number : 540 Question Id : 48558433905 Question Type : MCQ Option Shuffling : No Is Question Mandatory : No Calculator : None Response Time : N.A Think Time : N.A Minimum Instruction Time : 0**

**Correct Marks : 5 Wrong Marks : 1**

**Question Key Details :**

Key	Value
Comprehension	MCQ

In what ratio must a shopkeeper mix peas and soyabean of ₹16 and ₹25 per kg respectively, so as to obtain a mixture of ₹19 per kg?

1. 2 : 1

2. 7 : 5

3. 11 : 7

4. 13 : 8

**Options :**

485584135617. 1

485584135618. 2

485584135619. 3

485584135620. 4

**Question Number : 541 Question Id : 48558433906 Question Type : MCQ Option Shuffling : No Is Question Mandatory : No Calculator : None Response Time : N.A Think Time : N.A Minimum Instruction Time : 0**

**Correct Marks : 5 Wrong Marks : 1**

**Question Key Details :**

Key	Value
Comprehension	MCQ

Find the missing term

1, 4, 27, 16, ?, 36, 343

1. 25

2. 87

3. 120

4. 125

**Options :**

485584135621. 1

485584135622. 2

485584135623. 3

485584135624. 4

**Question Number : 542 Question Id : 48558433907 Question Type : MCQ Option Shuffling : No Is Question Mandatory : No Calculator : None Response Time : N.A Think Time : N.A Minimum Instruction Time : 0**

**Correct Marks : 5 Wrong Marks : 1**

**Question Key Details :**

Key	Value
Comprehension	MCQ

From the given statements, what conclusion can be made?

**Statements :** Some men are wise  
All wise are professors

**Conclusion I :** Some men are professors.  
**II :** All professors are wise

1. Only I follows
2. Only II follows
3. I and II follows
4. Either I or II follows

**Options :**

- 485584135625. 1
- 485584135626. 2
- 485584135627. 3
- 485584135628. 4

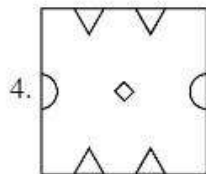
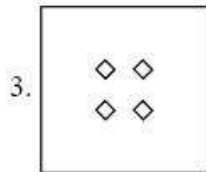
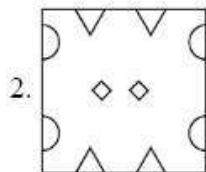
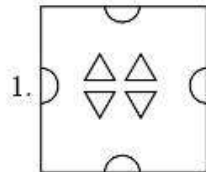
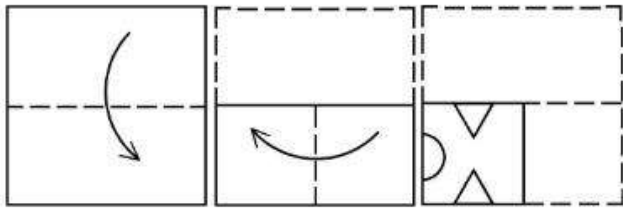
**Question Number : 543 Question Id : 48558433908 Question Type : MCQ Option Shuffling : No Is Question Mandatory : No Calculator : None Response Time : N.A Think Time : N.A Minimum Instruction Time : 0**

**Correct Marks : 5 Wrong Marks : 1**

**Question Key Details :**

Key	Value
Comprehension	MCQ

A piece of paper is folded and a cut is made as shown below. How it will appear when opened?



**Options :**

- 485584135629. 1
- 485584135630. 2
- 485584135631. 3
- 485584135632. 4

**Question Number : 544 Question Id : 48558433909 Question Type : MCQ Option Shuffling : No Is Question Mandatory : No Calculator : None Response Time : N.A Think Time : N.A Minimum Instruction Time : 0**

**Correct Marks : 5 Wrong Marks : 1**

**Question Key Details :**

Key	Value
Comprehension	MCQ

Manish goes 8 km in the North from his school. Now, turning to the left, he goes 15 km and again turns to the left and goes to 8 km. How far he is from his school and in which direction?

1. 15 km, South from school
2. 8 km, North from school
3. 8 km, West from school
4. 15 km, West from school

**Options :**

485584135633. 1  
485584135634. 2  
485584135635. 3  
485584135636. 4

**Question Number : 545 Question Id : 48558433910 Question Type : MCQ Option Shuffling : No Is Question Mandatory : No Calculator : None Response Time : N.A Think Time : N.A Minimum Instruction Time : 0**

**Correct Marks : 5 Wrong Marks : 1**

**Question Key Details :**

Key	Value
Comprehension	MCQ

Among P, Q, R, S, T, each having different weight, R is heavier than only P and S is lighter than Q and heavier than T. Who among them is the heaviest?

1. P
2. Q
3. S
4. T

**Options :**

485584135637. 1  
485584135638. 2  
485584135639. 3  
485584135640. 4

**Question Number : 546 Question Id : 48558433911 Question Type : MCQ Option Shuffling : No Is Question Mandatory : No Calculator : None Response Time : N.A Think Time : N.A Minimum Instruction Time : 0**

**Correct Marks : 5 Wrong Marks : 1**

**Question Key Details :**

Key	Value
Comprehension	MCQ



First two words are related in a certain way in:

Transition : Change :: Immobility : ?

Identify the suitable word in place of ? so that third and fourth words also become relatable the some manner.

1. Stillness
2. Liveliness
3. Action
4. Busyness

**Options :**

485584135641. 1  
485584135642. 2  
485584135643. 3  
485584135644. 4

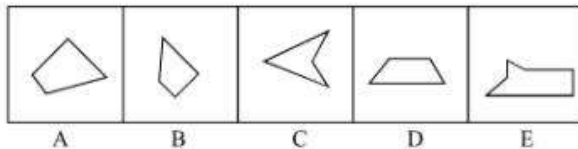
**Question Number : 547 Question Id : 48558433912 Question Type : MCQ Option Shuffling : No Is Question Mandatory : No Calculator : None Response Time : N.A Think Time : N.A Minimum Instruction Time : 0**

**Correct Marks : 5 Wrong Marks : 1**

**Question Key Details :**

Key	Value
Comprehension	MCQ

Which three of the given can be added to get a rectangular figure?



1. A, B, C
2. B, C, E
3. B, D, E
4. A, D, E

**Options :**

485584135645. 1  
485584135646. 2  
485584135647. 3  
485584135648. 4

**Question Number : 548 Question Id : 48558433913 Question Type : MCQ Option Shuffling : No Is Question Mandatory : No Calculator : None Response Time : N.A Think Time : N.A Minimum Instruction Time : 0**

**Correct Marks : 5 Wrong Marks : 1**

**Question Key Details :**

Key	Value
-----	-------

January 11, 1997 was a Sunday. What day of the week was on January 7, 2000?

1. Sunday
2. Monday
3. Saturday
4. Tuesday

**Options :**

485584135649. 1  
485584135650. 2  
485584135651. 3  
485584135652. 4


**Question Number : 549 Question Id : 48558433914 Question Type : MCQ Option Shuffling : No Is Question Mandatory : No Calculator : None Response Time : N.A Think Time : N.A Minimum Instruction Time : 0**

**Correct Marks : 5 Wrong Marks : 1**

**Question Key Details :**

Key	Value
Comprehension	MCQ

Choose the correct mirror image of the following:



1                      2                      3                      4

1. 1
2. 2
3. 3
4. 4

**Options :**

485584135653. 1  
485584135654. 2  
485584135655. 3  
485584135656. 4

**Question Number : 550 Question Id : 48558433915 Question Type : MCQ Option Shuffling : No Is Question Mandatory : No Calculator : None Response Time : N.A Think Time : N.A Minimum Instruction Time : 0**

Correct Marks : 5 Wrong Marks : 1

Question Key Details :

Key	Value
Comprehension	MCQ

Choose odd one out from the following:

1. Copper
2. Iron
3. Aluminium
4. Bromine

Options :

- 485584135657. 1
- 485584135658. 2
- 485584135659. 3
- 485584135660. 4

Question Number : 551 Question Id : 48558433916 Question Type : MCQ Option Shuffling : No Is Question Mandatory : No Calculator : None Response Time : N.A Think Time : N.A Minimum Instruction Time : 0

Correct Marks : 5 Wrong Marks : 1

Question Key Details :

Key	Value
Comprehension	MCQ

Study the following sequence and then answer the question given below:

9 H 7 Z A 9 2 B C H 3 1 X W V 5 T 4 M 6 0 Q 8 F J.

If every fourth letter/number in the above sequence starting from 7 is eliminated, which of the following will be fifth letter/number to the left of the 12th position from your right?

1. H
2. Z
3. A
4. C

Options :

- 485584135661. 1
- 485584135662. 2
- 485584135663. 3
- 485584135664. 4

Question Number : 552 Question Id : 48558433917 Question Type : MCQ Option Shuffling : No Is Question Mandatory : No Calculator : None Response Time : N.A Think Time : N.A Minimum Instruction Time : 0

Correct Marks : 5 Wrong Marks : 1

Question Key Details :

Key	Value
-----	-------

Comprehension	MCQ
---------------	-----

If you are head of your office, some media people come to your office and request you brief them about the pension plan of your office, you will:

1. Ask the media people to come some other day
2. Immediately accept the offer and brief them
3. Get them turned out of your office
4. Ask them to wait and to consult the official concerned

**Options :**

- 485584135665. 1
- 485584135666. 2
- 485584135667. 3
- 485584135668. 4

**Question Number : 553 Question Id : 48558433918 Question Type : MCQ Option Shuffling : No Is Question Mandatory : No Calculator : None Response Time : N.A Think Time : N.A Minimum Instruction Time : 0**

**Correct Marks : 5 Wrong Marks : 1**

**Question Key Details :**

Key	Value
Comprehension	MCQ

In a certain code, COMPUTER is coded as ETUPMOCR. How is INACTIVE written in the same code?

1. VITCANIE
2. VICTNAII
3. VICTANIF
4. VITCANIG

**Options :**

- 485584135669. 1
- 485584135670. 2
- 485584135671. 3
- 485584135672. 4

**Question Number : 554 Question Id : 48558433919 Question Type : MCQ Option Shuffling : No Is Question Mandatory : No Calculator : None Response Time : N.A Think Time : N.A Minimum Instruction Time : 0**

**Correct Marks : 5 Wrong Marks : 1**

**Question Key Details :**

Key	Value
Comprehension	MCQ

Select the figure from amongst the four alternatives, which when place in the blank space would complete the pattern?

×		×		×	
	×		×		×
×		×		×	
#		#			
	#				
#		#			

1.

#	#	#
	#	

2.

	#	
#		#
	#	

3.

#		#
#		#

4.

	#	
	#	
	#	

**Options :**

- 485584135673. 1
- 485584135674. 2
- 485584135675. 3
- 485584135676. 4

**Question Number : 555 Question Id : 48558433920 Question Type : MCQ Option Shuffling : No Is Question Mandatory : No Calculator : None Response Time : N.A Think Time : N.A Minimum Instruction Time : 0**

**Correct Marks : 5 Wrong Marks : 1**

**Question Key Details :**

Key	Value
Comprehension	MCQ

Rajni ranked 9th from the top and 38th from the bottom in a class. How many students are there in the class?

- 1. 46
- 2. 47
- 3. 45
- 4. 44

**Options :**

- 485584135677. 1
- 485584135678. 2
- 485584135679. 3
- 485584135680. 4

**Question Number : 556 Question Id : 48558433921 Question Type : MCQ Option Shuffling : No Is Question Mandatory : No Calculator : None Response Time : N.A Think Time : N.A Minimum Instruction Time : 0**

**Correct Marks : 5 Wrong Marks : 1**

**Question Key Details :**

Key	Value
Comprehension	MCQ

The following two numbers are connected by some relationship:

82 : 9

Identify the suitable pair to which the same relationship is applicable.

- 1. 5 : 26
- 2. 6 : 37
- 3. 35 : 6
- 4. 26 : 5

**Options :**

- 485584135681. 1
- 485584135682. 2
- 485584135683. 3
- 485584135684. 4

**Question Number : 557 Question Id : 48558433922 Question Type : MCQ Option Shuffling : No Is Question Mandatory : No Calculator : None Response Time : N.A Think Time : N.A Minimum Instruction Time : 0**

**Correct Marks : 5 Wrong Marks : 1**

**Question Key Details :**

Key	Value
Comprehension	MCQ

P and Q are married couple. A and B are brothers. A is the brother of P. How is B related to Q?

1. Brother-in-law
2. Cousin
3. Son
4. Brother

**Options :**

- 485584135685. 1
- 485584135686. 2
- 485584135687. 3
- 485584135688. 4

**Question Number : 558 Question Id : 48558433923 Question Type : MCQ Option Shuffling : No Is Question Mandatory : No Calculator : None Response Time : N.A Think Time : N.A Minimum Instruction Time : 0**

**Correct Marks : 5 Wrong Marks : 1**

**Question Key Details :**

Key	Value
Comprehension	MCQ

Below mentioned question consists of a statement followed by two arguments I and II.

**Statement :** Should 'education' be brought under the control of the Central Government like defence?

**Argument I :** No. Education is a state subject and it should remain with state.

**II :** Yes. This is the only way to establish uniformity in a growth of education across the states.

1. Only argument I is strong
2. Only argument II is strong.
3. Either I or II is strong
4. Neither I nor II is strong

**Options :**

- 485584135689. 1
- 485584135690. 2
- 485584135691. 3
- 485584135692. 4

**Question Number : 559 Question Id : 48558433924 Question Type : MCQ Option Shuffling : No Is Question Mandatory : No Calculator : None Response Time : N.A Think Time : N.A Minimum Instruction Time : 0**

**Correct Marks : 5 Wrong Marks : 1**

**Question Key Details :**

Key	Value
Comprehension	MCQ

Choose the correct option on the basis of the following statements and conclusions.

**Statement :** Morning walks are good for health.

**Conclusion I :** All healthy people go for morning walks.

**II :** Evening walks are harmful.

1. Only conclusion I follow
2. Only conclusion II follow
3. Both I and II follow
4. Neither I nor II follow

**Options :**

485584135693. 1

485584135694. 2

485584135695. 3

485584135696. 4

**Question Number : 560 Question Id : 48558433925 Question Type : MCQ Option Shuffling : No Is Question Mandatory : No Calculator : None Response Time : N.A Think Time : N.A Minimum Instruction Time : 0**

**Correct Marks : 5 Wrong Marks : 1**

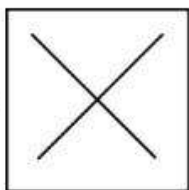
**Question Key Details :**

Key	Value
Comprehension	MCQ

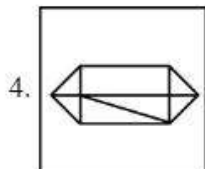
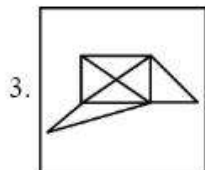
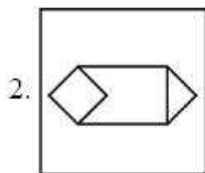
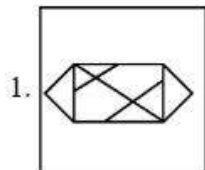


In which option problem figure is embedded :

Problem Figure :



Answer Figure:



**Options :**

- 485584135697. 1
- 485584135698. 2
- 485584135699. 3
- 485584135700. 4

**Question Number : 561 Question Id : 48558433926 Question Type : MCQ Option Shuffling : No Is Question Mandatory : No Calculator : None Response Time : N.A Think Time : N.A Minimum Instruction Time : 0**

**Correct Marks : 5 Wrong Marks : 1**

**Question Key Details :**

Key	Value
Comprehension	MCQ

Which city does not have Jantar Mantar observatories built by Jai Singh II in the early 18th century?

1. Jaipur
2. New Delhi
3. Agra
4. Ujjain

**Options :**

485584135701. 1  
485584135702. 2  
485584135703. 3  
485584135704. 4

**Question Number : 562 Question Id : 48558433927 Question Type : MCQ Option Shuffling : No Is Question Mandatory : No Calculator : None Response Time : N.A Think Time : N.A Minimum Instruction Time : 0**

**Correct Marks : 5 Wrong Marks : 1**

**Question Key Details :**

Key	Value
Comprehension	MCQ

Who founded the Pala empire?

1. Dharpala
2. Gopala
3. Jayadeva
4. Senpala

**Options :**

485584135705. 1  
485584135706. 2  
485584135707. 3  
485584135708. 4

**Question Number : 563 Question Id : 48558433928 Question Type : MCQ Option Shuffling : No Is Question Mandatory : No Calculator : None Response Time : N.A Think Time : N.A Minimum Instruction Time : 0**

**Correct Marks : 5 Wrong Marks : 1**

**Question Key Details :**

Key	Value
Comprehension	MCQ

Alai Darwaja was built by:

1. Muhammad - bin - Tughlaq
2. Ala-ud-din Khilji
3. Amir Khusro
4. Iltilthmish

**Options :**

- 485584135709. 1
- 485584135710. 2
- 485584135711. 3
- 485584135712. 4

**Question Number : 564 Question Id : 48558433929 Question Type : MCQ Option Shuffling : No Is Question Mandatory : No Calculator : None Response Time : N.A Think Time : N.A Minimum Instruction Time : 0**

**Correct Marks : 5 Wrong Marks : 1**

**Question Key Details :**

Key	Value
Comprehension	MCQ

Who found 'Ramakrishna Mission'?

1. Mahatma Gandhi
2. B.R. Ambedkar
3. Swami Vivekananda
4. Swami Dayanand Saraswati

**Options :**

- 485584135713. 1
- 485584135714. 2
- 485584135715. 3
- 485584135716. 4

**Question Number : 565 Question Id : 48558433930 Question Type : MCQ Option Shuffling : No Is Question Mandatory : No Calculator : None Response Time : N.A Think Time : N.A Minimum Instruction Time : 0**

**Correct Marks : 5 Wrong Marks : 1**

**Question Key Details :**

Key	Value
Comprehension	MCQ

One light year is equals to \_\_\_\_\_.

1.  $9.46 \times 10^{12}$  km
2.  $1.12 \times 10^{10}$  km
3.  $9.00 \times 10^8$  km
4.  $9.42 \times 10^9$  km

**Options :**

485584135717. 1  
485584135718. 2  
485584135719. 3  
485584135720. 4

**Question Number : 566 Question Id : 48558433931 Question Type : MCQ Option Shuffling : No Is Question Mandatory : No Calculator : None Response Time : N.A Think Time : N.A Minimum Instruction Time : 0**

**Correct Marks : 5 Wrong Marks : 1**

**Question Key Details :**

Key	Value
Comprehension	MCQ

What is scientific name of 'Horse'?

1. Felis catus
2. Capra hercus
3. Eqqus caballus
4. Nija naja

**Options :**

485584135721. 1  
485584135722. 2  
485584135723. 3  
485584135724. 4

**Question Number : 567 Question Id : 48558433932 Question Type : MCQ Option Shuffling : No Is Question Mandatory : No Calculator : None Response Time : N.A Think Time : N.A Minimum Instruction Time : 0**

**Correct Marks : 5 Wrong Marks : 1**

**Question Key Details :**

Key	Value
Comprehension	MCQ

The change of gaseous state directly to solid state without going through liquid state is called \_\_\_\_\_.

1. Soildification
2. Sublimation
3. Deposition
4. Evaporation

**Options :**

485584135725. 1  
485584135726. 2  
485584135727. 3  
485584135728. 4

**Question Number : 568 Question Id : 48558433933 Question Type : MCQ Option Shuffling : No Is Question Mandatory : No Calculator : None Response Time : N.A Think Time : N.A Minimum Instruction Time : 0**

**Correct Marks : 5 Wrong Marks : 1**

**Question Key Details :**

Key	Value
Comprehension	MCQ

Who among the following in Ancient India made some prominent discoveries in Physics?

1. Sushruta
2. Charaka
3. Kanada
4. Nagarjuna

**Options :**

485584135729. 1  
485584135730. 2  
485584135731. 3  
485584135732. 4

**Question Number : 569 Question Id : 48558433934 Question Type : MCQ Option Shuffling : No Is Question Mandatory : No Calculator : None Response Time : N.A Think Time : N.A Minimum Instruction Time : 0**

**Correct Marks : 5 Wrong Marks : 1**

**Question Key Details :**

Key	Value
Comprehension	MCQ

Honourable Prime Minister of India has led the foundation for manufacturing plant of C-295 Aircraft at \_\_\_\_\_.

1. Gandhi Nagar
2. Rajkot
3. Surat
4. Vadodara

**Options :**

485584135733. 1  
485584135734. 2  
485584135735. 3  
485584135736. 4

**Question Number : 570 Question Id : 48558433935 Question Type : MCQ Option Shuffling : No Is Question Mandatory : No Calculator : None Response Time : N.A Think Time : N.A Minimum Instruction Time : 0**

**Correct Marks : 5 Wrong Marks : 1**

**Question Key Details :**

Key	Value
Comprehension	MCQ

In 2022, National conference on e-governance was held in \_\_\_\_\_.

1. Mumbai
2. Goa
3. New Delhi
4. Kolkata

**Options :**

485584135737. 1  
485584135738. 2  
485584135739. 3  
485584135740. 4

**Question Number : 571 Question Id : 48558433936 Question Type : MCQ Option Shuffling : No Is Question Mandatory : No Calculator : None Response Time : N.A Think Time : N.A Minimum Instruction Time : 0**

**Correct Marks : 5 Wrong Marks : 1**

**Question Key Details :**

Key	Value
Comprehension	MCQ

Naftali Bennett was sworn in as Israel's new Prime Minister on:

1. June 13, 2021
2. May 10, 2021
3. April 20, 2021
4. February, 2021

**Options :**

- 485584135741. 1
- 485584135742. 2
- 485584135743. 3
- 485584135744. 4

**Question Number : 572 Question Id : 48558433937 Question Type : MCQ Option Shuffling : No Is Question Mandatory : No Calculator : None Response Time : N.A Think Time : N.A Minimum Instruction Time : 0**

**Correct Marks : 5 Wrong Marks : 1**

**Question Key Details :**

Key	Value
Comprehension	MCQ

Which of the following country become 11<sup>th</sup> member of ASEAN?

1. Vietnam
2. East Timor
3. Philippines
4. Laos

**Options :**

- 485584135745. 1
- 485584135746. 2
- 485584135747. 3
- 485584135748. 4

**Question Number : 573 Question Id : 48558433938 Question Type : MCQ Option Shuffling : No Is Question Mandatory : No Calculator : None Response Time : N.A Think Time : N.A Minimum Instruction Time : 0**

**Correct Marks : 5 Wrong Marks : 1**

**Question Key Details :**

Key	Value
Comprehension	MCQ

Which of the following cities is known as the 'Cashew Capital of the World'?

1. Kozhikode
2. Kurnool
3. Kumbakonam
4. Kollam

**Options :**

485584135749. 1  
485584135750. 2  
485584135751. 3  
485584135752. 4

**Question Number : 574 Question Id : 48558433939 Question Type : MCQ Option Shuffling : No Is Question Mandatory : No Calculator : None Response Time : N.A Think Time : N.A Minimum Instruction Time : 0**

**Correct Marks : 5 Wrong Marks : 1**

**Question Key Details :**

Key	Value
Comprehension	MCQ

Laterite soil is formed due to intense leaching. Red laterite soil in Kerala is more suitable for:

1. Wheat
2. Paddy
3. Cashew nut
4. Cotton

**Options :**

485584135753. 1  
485584135754. 2  
485584135755. 3  
485584135756. 4

**Question Number : 575 Question Id : 48558433940 Question Type : MCQ Option Shuffling : No Is Question Mandatory : No Calculator : None Response Time : N.A Think Time : N.A Minimum Instruction Time : 0**

**Correct Marks : 5 Wrong Marks : 1**

**Question Key Details :**

Key	Value
Comprehension	MCQ



Smallest planet of solar system is?

1. Venus
2. Mercury
3. Uranus
4. Neptune

**Options :**

485584135757. 1  
485584135758. 2  
485584135759. 3  
485584135760. 4

**Question Number : 576 Question Id : 48558433941 Question Type : MCQ Option Shuffling : No Is Question Mandatory : No Calculator : None Response Time : N.A Think Time : N.A Minimum Instruction Time : 0**

**Correct Marks : 5 Wrong Marks : 1**

**Question Key Details :**

Key	Value
Comprehension	MCQ

The number of seats for Lok Sabha from Himachal Pradesh is:

1. 4
2. 14
3. 24
4. 5

**Options :**

485584135761. 1  
485584135762. 2  
485584135763. 3  
485584135764. 4

**Question Number : 577 Question Id : 48558433942 Question Type : MCQ Option Shuffling : No Is Question Mandatory : No Calculator : None Response Time : N.A Think Time : N.A Minimum Instruction Time : 0**

**Correct Marks : 5 Wrong Marks : 1**

**Question Key Details :**

Key	Value
Comprehension	MCQ

Which of the following generates maximum employment in India?

1. Secondary section
2. Primary section
3. Railways
4. Tertiary section

**Options :**

485584135765. 1  
485584135766. 2  
485584135767. 3  
485584135768. 4

**Question Number : 578 Question Id : 48558433943 Question Type : MCQ Option Shuffling : No Is Question Mandatory : No Calculator : None Response Time : N.A Think Time : N.A Minimum Instruction Time : 0**

**Correct Marks : 5 Wrong Marks : 1**

**Question Key Details :**

Key	Value
Comprehension	MCQ

The book "Mind Master: Winning Lessons from a Champion's Life" is about whom amongst the following?

1. Viswanathan Anand
2. M.S. Dhoni
3. Virat Kohli
4. Sachin Tendulkar

**Options :**

485584135769. 1  
485584135770. 2  
485584135771. 3  
485584135772. 4

**Question Number : 579 Question Id : 48558433944 Question Type : MCQ Option Shuffling : No Is Question Mandatory : No Calculator : None Response Time : N.A Think Time : N.A Minimum Instruction Time : 0**

**Correct Marks : 5 Wrong Marks : 1**

**Question Key Details :**

Key	Value
Comprehension	MCQ

The place where ISRO organised 'Human Spaceflight Expo'?

1. Ahmedabad
2. Bengaluru
3. Thiruvananthpuram
4. Mumbai

**Options :**

485584135773. 1  
485584135774. 2  
485584135775. 3  
485584135776. 4

**Question Number : 580 Question Id : 48558433945 Question Type : MCQ Option Shuffling : No Is Question Mandatory : No Calculator : None Response Time : N.A Think Time : N.A Minimum Instruction Time : 0**

**Correct Marks : 5 Wrong Marks : 1**

**Question Key Details :**

Key	Value
Comprehension	MCQ

Who among the following used the term 'Green Revolution' for increasing agricultural production in India?

1. Norman Borlaug
2. M.S. Swaminathan
3. Raj Krishna
4. R.K.V. Rao

**Options :**

485584135777. 1  
485584135778. 2  
485584135779. 3  
485584135780. 4

## Urdu

<b>Group Number :</b>	14
<b>Group Id :</b>	485584752
<b>Group Maximum Duration :</b>	45
<b>Group Minimum Duration :</b>	45
<b>Show Attended Group? :</b>	No
<b>Edit Attended Group? :</b>	No
<b>Break time :</b>	0
<b>Group Marks :</b>	200
<b>Is this Group for Examiner? :</b>	No
<b>Examiner permission :</b>	Cant View
<b>Show Progress Bar? :</b>	No

## Urdu

<b>Section Id :</b>	485584870
<b>Section Number :</b>	1
<b>Section type :</b>	Online
<b>Mandatory or Optional :</b>	Mandatory
<b>Number of Questions :</b>	50
<b>Number of Questions to be attempted :</b>	40
<b>Section Marks :</b>	200
<b>Enable Mark as Answered Mark for Review and Clear Response :</b>	Yes
<b>Maximum Instruction Time :</b>	0
<b>Sub-Section Number :</b>	1
<b>Sub-Section Id :</b>	4855842449
<b>Question Shuffling Allowed :</b>	No
<b>Is Section Default? :</b>	null
<b>Sub-Section Number :</b>	2
<b>Sub-Section Id :</b>	4855842450
<b>Question Shuffling Allowed :</b>	Yes
<b>Is Section Default? :</b>	null
<b>Sub-Section Number :</b>	3
<b>Sub-Section Id :</b>	4855842451
<b>Question Shuffling Allowed :</b>	No
<b>Is Section Default? :</b>	null
<b>Sub-Section Number :</b>	4
<b>Sub-Section Id :</b>	4855842452
<b>Question Shuffling Allowed :</b>	No
<b>Is Section Default? :</b>	null
<b>Sub-Section Number :</b>	5
<b>Sub-Section Id :</b>	4855842453
<b>Question Shuffling Allowed :</b>	Yes
<b>Is Section Default? :</b>	null