

National Testing Agency

Question Paper Name : 18S1
Subject Name : 18Jun2023 Shift1 Subject Combination 1
Creation Date : 2023-06-18 15:55:18
Duration : 645
Total Marks : 2850
Display Marks: Yes

English

Group Number : 1
Group Id : 485584739
Group Maximum Duration : 45
Group Minimum Duration : 45
Show Attended Group? : No
Edit Attended Group? : No
Break time : 0
Group Marks : 200
Is this Group for Examiner? : No
Examiner permission : Cant View
Show Progress Bar? : No

English

Section Id : 485584853
Section Number : 1
Section type : Online
Mandatory or Optional : Mandatory
Number of Questions : 50
Number of Questions to be attempted : 40
Section Marks : 200
Enable Mark as Answered Mark for Review and Clear Response : Yes
Maximum Instruction Time : 0
Sub-Section Number : 1
Sub-Section Id : 4855842402
Question Shuffling Allowed : No
Is Section Default? : null

**Question Number : 1 Question Id : 48558433166 Question Type : MCQ Option Shuffling : No Is Question Mandatory : No
Calculator : None Response Time : N.A Think Time : N.A Minimum Instruction Time : 0**

Correct Marks : 5 Wrong Marks : 1

Question Key Details :

Key	Value
Comprehension	Comp1

Unquestionably a literary life is for the most part an unhappy life; because, if you have genius, you must suffer the penalty of genius; and if you have only talent, there are so many cares and worries incidental to the circumstances of men of letters, as to make life exceedingly miserable. Besides the pangs of composition, and the continuous disappointment which a trues artist feels at his inability to reveal himself, there is the ever-recurring difficulty of gaining the public ear. Young writers are buoyed up by the hope and the belief that they have only to print to be acknowledged at once as a new light in literature. You can never convince a young author that the editors of magazines and the publishers of books are a practical body of men, who are by no means frantically anxious about placing the best literature before the public. Nay, that for the most part they are mere brokers, who conduct their business on the hardest lines of a Profit and Loss account. But supposing your book fairly launches, its perils, are only beginning. You have to run the gauntlet of the critics. To a young author, again, this seems to be as terrible on ordeal as passing down the files of Sioux or Comanche Indians, each one of whom is thirsting for your scalp. When you are a little older, you will find that criticism is not much more serious than the bye-play of clowns in a circus, when they beat around the ring the victim with bladders slung at the end of long poles. A time comes in the life of every author when he regards critics as comical rather than formidable, and goes his way unheeding. But there are sensitive souls that yield under the chastisement and, perhaps after suffering much silent torture, abandon the profession of the pen for ever, Keats, perhaps, is the saddest example of a fine spirit hounded to death by savage criticism; because, whatever his biographers may aver, that furious attack of Gifford and Terry undoubtedly expediated his death. But no doubt there are hundreds who suffer keenly hostile and unscrupulous criticism, and who have to bear that suffering in silence, because it is a cardinal principle in literature that the most unwise thing in the world for an author is to take public notice of criticism in the way of defending himself. Silence is the only safeguard, as it is the only dignified protest against insult and offence.

Why is the literary life mostly an unhappy one?

1. Most people don't understand literary people
2. They have to suffer the penalty of genius
3. Literary life is not about richness
4. They do not get the publishers easily

Options :

- 485584132661. 1
- 485584132662. 2
- 485584132663. 3
- 485584132664. 4

Question Number : 2 Question Id : 48558433167 Question Type : MCQ Option Shuffling : No Is Question Mandatory : No Calculator : None Response Time : N.A Think Time : N.A Minimum Instruction Time : 0

Correct Marks : 5 Wrong Marks : 1

Question Key Details :

Key	Value
Comprehension	Comp1

Unquestionably a literary life is for the most part an unhappy life; because, if you have genius, you must suffer the penalty of genius; and if you have only talent, there are so many cares and worries incidental to the circumstances of men of letters, as to make life exceedingly miserable. Besides the pangs of composition, and the continuous disappointment which a trues artist feels at his inability to reveal himself, there is the ever-recurring difficulty of gaining the public ear. Young writers are buoyed up by the hope and the belief that they have only to print to be acknowledged at once as a new light in literature. You can never convince a young author that the editors of magazines and the publishers of books are a practical body of men, who are by no means frantically anxious about placing the best literature before the public. Nay, that for the most part they are mere brokers, who conduct their business on the hardest lines of a Profit and Loss account. But supposing your book fairly launches, its perils, are only beginning. You have to run the gauntlet of the critics. To a young author, again, this seems to be as terrible on ordeal as passing down the files of Sioux or Comanche Indians, each one of whom is thirsting for your scalp. When you are a little older, you will find that criticism is not much more serious than the bye-play of clowns in a circus, when they beat around the ring the victim with bladders slung at the end of long poles. A time comes in the life of every author when he regards critics as comical rather than formidable, and goes his way unheeding. But there are sensitive souls that yield under the chastisement and, perhaps after suffering much silent torture, abandon the profession of the pen for ever, Keats, perhaps, is the saddest example of a fine spirit hounded to death by savage criticism; because, whatever his biographers may aver, that furious attack of Gifford and Terry undoubtedly expediated his death. But no doubt there are hundreds who suffer keenly hostile and unscrupulous criticism, and who have to bear that suffering in silence, because it is a cardinal principle in literature that the most unwise thing in the world for an author is to take public notice of criticism in the way of defending himself. Silence is the only safeguard, as it is the only dignified protest against insult and offence.

What is the ambition of a young author?

1. To create big name in the literary world
2. To achieve name and fame instantly
3. To create a big dent in the knowledge world
4. To dislodge other big names in the literary world

Options :

- 485584132665. 1
- 485584132666. 2
- 485584132667. 3
- 485584132668. 4

Question Number : 3 Question Id : 48558433168 Question Type : MCQ Option Shuffling : No Is Question Mandatory : No Calculator : None Response Time : N.A Think Time : N.A Minimum Instruction Time : 0

Correct Marks : 5 Wrong Marks : 1

Question Key Details :

Key	Value
Comprehension	Comp1

Unquestionably a literary life is for the most part an unhappy life; because, if you have genius, you must suffer the penalty of genius; and if you have only talent, there are so many cares and worries incidental to the circumstances of men of letters, as to make life exceedingly miserable. Besides the pangs of composition, and the continuous disappointment which a trues artist feels at his inability to reveal himself, there is the ever-recurring difficulty of gaining the public ear. Young writers are buoyed up by the hope and the belief that they have only to print to be acknowledged at once as a new light in literature. You can never convince a young author that the editors of magazines and the publishers of books are a practical body of men, who are by no means frantically anxious about placing the best literature before the public. Nay, that for the most part they are mere brokers, who conduct their business on the hardest lines of a Profit and Loss account. But supposing your book fairly launches, its perils, are only beginning. You have to run the gauntlet of the critics. To a young author, again, this seems to be as terrible on ordeal as passing down the files of Sioux or Comanche Indians, each one of whom is thirsting for your scalp. When you are a little older, you will find that criticism is not much more serious than the bye-play of clowns in a circus, when they beat around the ring the victim with bladders slung at the end of long poles. A time comes in the life of every author when he regards critics as comical rather than formidable, and goes his way unheeding. But there are sensitive souls that yield under the chastisement and, perhaps after suffering much silent torture, abandon the profession of the pen for ever, Keats, perhaps, is the saddest example of a fine spirit hounded to death by savage criticism; because, whatever his biographers may aver, that furious attack of Gifford and Terry undoubtedly expediated his death. But no doubt there are hundreds who suffer keenly hostile and unscrupulous criticism, and who have to bear that suffering in silence, because it is a cardinal principle in literature that the most unwise thing in the world for an author is to take public notice of criticism in the way of defending himself. Silence is the only safeguard, as it is the only dignified protest against insult and offence.

What is the general response of the editors and publishers towards young authors?

1. They are very sympathetic
2. They are very hostile
3. They are very welcoming
4. They are highly indifferent

Options :

- 485584132669. 1
- 485584132670. 2
- 485584132671. 3
- 485584132672. 4

Question Number : 4 Question Id : 48558433169 Question Type : MCQ Option Shuffling : No Is Question Mandatory : No Calculator : None Response Time : N.A Think Time : N.A Minimum Instruction Time : 0

Correct Marks : 5 Wrong Marks : 1

Question Key Details :

Key	Value
Comprehension	Comp1

Unquestionably a literary life is for the most part an unhappy life; because, if you have genius, you must suffer the penalty of genius; and if you have only talent, there are so many cares and worries incidental to the circumstances of men of letters, as to make life exceedingly miserable. Besides the pangs of composition, and the continuous disappointment which a trues artist feels at his inability to reveal himself, there is the ever-recurring difficulty of gaining the public ear. Young writers are buoyed up by the hope and the belief that they have only to print to be acknowledged at once as a new light in literature. You can never convince a young author that the editors of magazines and the publishers of books are a practical body of men, who are by no means frantically anxious about placing the best literature before the public. Nay, that for the most part they are mere brokers, who conduct their business on the hardest lines of a Profit and Loss account. But supposing your book fairly launches, its perils, are only beginning. You have to run the gauntlet of the critics. To a young author, again, this seems to be as terrible on ordeal as passing down the files of Sioux or Comanche Indians, each one of whom is thirsting for your scalp. When you are a little older, you will find that criticism is not much more serious than the bye-play of clowns in a circus, when they beat around the ring the victim with bladders slung at the end of long poles. A time comes in the life of every author when he regards critics as comical rather than formidable, and goes his way unheeding. But there are sensitive souls that yield under the chastisement and, perhaps after suffering much silent torture, abandon the profession of the pen for ever, Keats, perhaps, is the saddest example of a fine spirit hounded to death by savage criticism; because, whatever his biographers may aver, that furious attack of Gifford and Terry undoubtedly expediated his death. But no doubt there are hundreds who suffer keenly hostile and unscrupulous criticism, and who have to bear that suffering in silence, because it is a cardinal principle in literature that the most unwise thing in the world for an author is to take public notice of criticism in the way of defending himself. Silence is the only safeguard, as it is the only dignified protest against insult and offence.

What attitude should an author adopt in the face of bitter critics?

1. All criticism should be accepted nicely.
2. All criticism should be rejected.
3. All criticism should be written about.
4. Silence is the best response.

Options :

- 485584132673. 1
- 485584132674. 2
- 485584132675. 3
- 485584132676. 4

Question Number : 5 Question Id : 48558433170 Question Type : MCQ Option Shuffling : No Is Question Mandatory : No Calculator : None Response Time : N.A Think Time : N.A Minimum Instruction Time : 0

Correct Marks : 5 Wrong Marks : 1

Question Key Details :

Key	Value
Comprehension	Comp1

Unquestionably a literary life is for the most part an unhappy life; because, if you have genius, you must suffer the penalty of genius; and if you have only talent, there are so many cares and worries incidental to the circumstances of men of letters, as to make life exceedingly miserable. Besides the pangs of composition, and the continuous disappointment which a trues artist feels at his inability to reveal himself, there is the ever-recurring difficulty of gaining the public ear. Young writers are buoyed up by the hope and the belief that they have only to print to be acknowledged at once as a new light in literature. You can never convince a young author that the editors of magazines and the publishers of books are a practical body of men, who are by no means frantically anxious about placing the best literature before the public. Nay, that for the most part they are mere brokers, who conduct their business on the hardest lines of a Profit and Loss account. But supposing your book fairly launches, its perils, are only beginning. You have to run the gauntlet of the critics. To a young author, again, this seems to be as terrible on ordeal as passing down the files of Sioux or Comanche Indians, each one of whom is thirsting for your scalp. When you are a little older, you will find that criticism is not much more serious than the bye-play of clowns in a circus, when they beat around the ring the victim with bladders slung at the end of long poles. A time comes in the life of every author when he regards critics as comical rather than formidable, and goes his way unheeding. But there are sensitive souls that yield under the chastisement and, perhaps after suffering much silent torture, abandon the profession of the pen for ever, Keats, perhaps, is the saddest example of a fine spirit hounded to death by savage criticism; because, whatever his biographers may aver, that furious attack of Gifford and Terry undoubtedly expediated his death. But no doubt there are hundreds who suffer keenly hostile and unscrupulous criticism, and who have to bear that suffering in silence, because it is a cardinal principle in literature that the most unwise thing in the world for an author is to take public notice of criticism in the way of defending himself. Silence is the only safeguard, as it is the only dignified protest against insult and offence.

Explain "Abandon the profession of pen"

1. Publishing sector
2. literary life
3. Pen-making Industry
4. The world of critics

Options :

- 485584132677. 1
- 485584132678. 2
- 485584132679. 3
- 485584132680. 4

Sub-Section Number : 2
Sub-Section Id : 4855842403
Question Shuffling Allowed : No
Is Section Default? : null

Question Number : 6 Question Id : 48558433171 Question Type : MCQ Option Shuffling : No Is Question Mandatory : No Calculator : None Response Time : N.A Think Time : N.A Minimum Instruction Time : 0

Correct Marks : 5 Wrong Marks : 1

Question Key Details :

Key	Value
Comprehension	Comp2

Organisms change over time. Some of these changes make no difference to the success or failure of the organism that inherit them; other changes do. Take a group of antelopes in which one individual has longer legs than its siblings. Those longer legs make the individual better at escaping from predators, hence giving it an advantage in the survival stakes. Its descendants inherit this feature and are better able to survive as a consequence. Those longer legs have thus become an 'adaptation' Their evolution means that this particular lineage of ante lopes has adapted to its conditions, thanks to its development of this features. Their evolution means that this particular lineage of ante lopes

Over the generations, the individual components of the genetic code within a species change, or mutate. So far as we know, mutations mny provide no evolutionary advantage at all. They may be disadvantageous, in which case they are weeded out via natural selection; or they may be advantageous, in which case they persist through the generations.

Choose the most appropriate meaning of the given word:

MUTATION

1. undergo a change in the genetic code
2. transform into another organism
3. a rupture in the organism's growth
4. rapid change in the bone structure of the organism

Options :

- 485584132681. 1
- 485584132682. 2
- 485584132683. 3
- 485584132684. 4

Question Number : 7 Question Id : 48558433172 Question Type : MCQ Option Shuffling : No Is Question Mandatory : No Calculator : None Response Time : N.A Think Time : N.A Minimum Instruction Time : 0

Correct Marks : 5 Wrong Marks : 1

Question Key Details :

Key	Value
Comprehension	Comp2

Organisms change over time. Some of these changes make no difference to the success or failure of the organism that inherit them; other changes do. Take a group of antelopes in which one individual has longer legs than its siblings. Those longer legs make the individual better at escaping from predators, hence giving it an advantage in the survival stakes. Its descendants inherit this feature and are better able to survive as a consequence. Those longer legs have thus become an 'adaptation' Their evolution means that this particular lineage of ante lopes has adapted to its conditions, thanks to its development of this features. Their evolution means that this particular lineage of ante lopes

Over the generations, the individual components of the genetic code within a species change, or mutate. So far as we know, mutations mny provide no evolutionary advantage at all. They may be disadvantageous, in which case they are weeded out via natural selection; or they may be advantageous, in which case they persist through the generations.

Choose the most appropriate answer to the following question.
How have antelopes adapted to get better at escaping from predators?

1. The long legs of the antelopes help them run faster and have become an adaptations
2. Their horns help them defeat predators
3. They have no advantageous mutations
4. They have a keen sense of smell

Options :

- 485584132685. 1
- 485584132686. 2
- 485584132687. 3
- 485584132688. 4

Question Number : 8 Question Id : 48558433173 Question Type : MCQ Option Shuffling : No Is Question Mandatory : No Calculator : None Response Time : N.A Think Time : N.A Minimum Instruction Time : 0

Correct Marks : 5 Wrong Marks : 1

Question Key Details :

Key	Value
Comprehension	Comp2

Organisms change over time. Some of these changes make no difference to the success or failure of the organism that inherit them; other changes do. Take a group of antelopes in which one individual has longer legs than its siblings. Those longer legs make the individual better at escaping from predators, hence giving it an advantage in the survival stakes. Its descendants inherit this feature and are better able to survive as a consequence. Those longer legs have thus become an 'adaptation' Their evolution means that this particular lineage of antelopes has adapted to its conditions, thanks to its development of this features. Their evolution means that this particular lineage of antelopes

Over the generations, the individual components of the genetic code within a species change, or mutate. So far as we know, mutations may provide no evolutionary advantage at all. They may be disadvantageous, in which case they are weeded out via natural selection; or they may be advantageous, in which case they persist through the generations.

What happens to disadvantageous mutations?

1. they are renewed through natural reduction
2. They persist through the generations
3. They remain an additional burden on the species
4. None of the above

Options :

- 485584132689. 1
- 485584132690. 2
- 485584132691. 3
- 485584132692. 4

Question Number : 9 Question Id : 48558433174 Question Type : MCQ Option Shuffling : No Is Question Mandatory : No Calculator : None Response Time : N.A Think Time : N.A Minimum Instruction Time : 0

Correct Marks : 5 Wrong Marks : 1

Question Key Details :

Key	Value
Comprehension	Comp2

Organisms change over time. Some of these changes make no difference to the success or failure of the organism that inherit them; other changes do. Take a group of antelopes in which one individual has longer legs than its siblings. Those longer legs make the individual better at escaping from predators, hence giving it an advantage in the survival stakes. Its descendants inherit this feature and are better able to survive as a consequence. Those longer legs have thus become an 'adaptation' Their evolution means that this particular lineage of ante lopes has adapted to its conditions, thanks to its development of this features. Their evolution means that this particular lineage of ante lopes

Over the generations, the individual components of the genetic code within a species change, or mutate. So far as we know, mutations mny provide no evolutionary advantage at all. They may be disadvantageous, in which case they are weeded out via natural selection; or they may be advantageous, in which case they persist through the generations.

Why do some mutations persist through generations?

1. They are harmful to the animal
2. They make no difference to the animal's survival
3. They are ornamental
4. They are advantageous to the animal

Options :

485584132693. 1

485584132694. 2

485584132695. 3

485584132696. 4

Question Number : 10 Question Id : 48558433175 Question Type : MCQ Option Shuffling : No Is Question Mandatory : No Calculator : None Response Time : N.A Think Time : N.A Minimum Instruction Time : 0

Correct Marks : 5 Wrong Marks : 1

Question Key Details :

Key	Value
Comprehension	Comp2

Organisms change over time. Some of these changes make no difference to the success or failure of the organism that inherit them; other changes do. Take a group of antelopes in which one individual has longer legs than its siblings. Those longer legs make the individual better at escaping from predators, hence giving it an advantage in the survival stakes. Its descendants inherit this feature and are better able to survive as a consequence. Those longer legs have thus become an 'adaptation' Their evolution means that this particular lineage of ante lopes has adapted to its conditions, thanks to its development of this features. Their evolution means that this particular lineage of ante lopes

Over the generations, the individual components of the genetic code within a species change, or mutate. So far as we know, mutations mny provide no evolutionary advantage at all. They may be disadvantageous, in which case they are weeded out via natural selection; or they may be advantageous, in which case they persist through the generations.

Choose an appropriate title for the passage from the following options:-

1. Adaptation and Mutation
2. Mutation: A Necessity
3. Genetic Code
4. Survival of the Antelope

Options :

- 485584132697. 1
- 485584132698. 2
- 485584132699. 3
- 485584132700. 4

Sub-Section Number : 3
Sub-Section Id : 4855842404
Question Shuffling Allowed : No
Is Section Default? : null

Question Number : 11 Question Id : 48558433176 Question Type : MCQ Option Shuffling : No Is Question Mandatory : No Calculator : None Response Time : N.A Think Time : N.A Minimum Instruction Time : 0

Correct Marks : 5 Wrong Marks : 1

Question Key Details :

Key	Value
Comprehension	Comp3

Supposing you have to make a payment of Rs.100, you can do so in rupees-coins; but it would be cumbersome to pay in nickel or copper coins, because they are heavy to carry and also because it takes much time to count them. The government therefore permits you to make the payment in rupee-notes. What are these rupee notes really? They are kind of money, right enough, although they are made of paper instead of metal. You can use them in just the same way that you use ordinary money. The reason why they are made of paper and used is that they save the trouble of carrying metal coins about-of course, paper is lighter than metal-and they also save using silver and other metals when they are scarce.

What makes these mere pieces of of paper bear the value of the number of rupees that is printed upon them? Why should a piece of paper, with "100" printed on it be worth twenty times as much as a piece of paper with "five" printed on it-and also worth a hundred times as much as a silver rupee-coin? The reason is that Government guarantees that the piece of paper is worth the amount printed an it and promised to pay that amount to any body who wishes to exchange this paper for the rupee-coins. Also, if you think about it you can easily realize that crores and crores more of rupee-coins would have to be minted, if all paper-money were abolished.

Perhaps you may ask, "Then why not have paper money only?" Why use silver and Nickle and copper at all? The answer is-because money must, as we have already said, be something so useful that everyone wants. Also because the metals are the best form of money; and thirdly because it would be impossible to print just the right amount of paper money that would keep prices at their proper natural level. It any Government prints too much paper money, then prices go up at once. The supply of money is increased and therefore its value (in food, clothes, books, houses, land, tools and everything else) goes down.

You may think at first that it is queer to talk of having too much paper money and the money is so nice and useful that you cannot have too much of it. But if you think that, I an afraid you are forgetting that money is only useful for what it will buy; so it is no good at all having more money if there are no more things to buy with it. The more money there is , the higher will be the prices of everything. The same thing happens with rupee-coins as with paper money. But it is not likely to happen, for this reason: it is very easy to print a great deal of paper money, but not at all easy to increase the amount there is if it keeps very steady and changes very little. In fact that is one of the chief reasons why it was chosen to make coins of.

The Government allows payment to be made in _____

1. nickel
2. rupee coins
3. copper coins
4. rupee notes

Options :

- 485584132701. 1
- 485584132702. 2
- 485584132703. 3
- 485584132704. 4

Question Number : 12 Question Id : 48558433177 Question Type : MCQ Option Shuffling : No Is Question Mandatory : No Calculator : None Response Time : N.A Think Time : N.A Minimum Instruction Time : 0

Correct Marks : 5 Wrong Marks : 1

Question Key Details :

Key	Value
Comprehension	Comp3

Supposing you have to make a payment of Rs.100, you can do so in rupees-coins; but it would be cumbersome to pay in nickel or copper coins, because they are heavy to carry and also because it takes much time to count them. The government therefore permits you to make the payment in rupee-notes. What are these rupee notes really? They are kind of money, right enough, although they are made of paper instead of metal. You can use them in just the same way that you use ordinary money. The reason why they are made of paper and used is that they save the trouble of carrying metal coins about-of course, paper is lighter than metal-and they also save using silver and other metals when they are scarce.

What makes these mere pieces of of paper bear the value of the number of rupees that is printed upon them? Why should a piece of paper, with "100" printed on it be worth twenty times as much as a piece of paper with "five" printed on it-and also worth a hundred times as much as a silver rupee-coin? The reason is that Government guarantees that the piece of paper is worth the amount printed an it and promised to pay that amount to any body who wishes to exchange this paper for the rupee-coins. Also, if you think about it you can easily realize that crores and crores more of rupee-coins would have to be minted, if all paper-money were abolished.

Perhaps you may ask, "Then why not have paper money only?" Why use silver and Nickle and copper at all? The answer is-because money must, as we have already said, be something so useful that everyone wants. Also because the metals are the best form of money; and thirdly because it would be impossible to print just the right amount of paper money that would keep prices at their proper natural level. If any Government prints too much paper money, then prices go up at once. The supply of money is increased and therefore its value (in food, clothes, books, houses, land, tools and everything else) goes down.

You may think at first that it is queer to talk of having too much paper money and the money is so nice and useful that you cannot have too much of it. But if you think that, I an afraid you are forgetting that money is only useful for what it will buy; so it is no good at all having more money if there are no more things to buy with it. The more money there is , the higher will be the prices of everything. The same thing happens with rupee-coins as with paper money. But it is not likely to happen, for this reason: it is very easy to print a great deal of paper money, but not at all easy to increase the amount there is if it keeps very steady and changes very little. In fact that is one of the chief reasons why it was chosen to make coins of.

What are these rupee notes made of?

1. coins
2. nickel
3. paper
4. copper coins

Options :

485584132705. 1
485584132706. 2
485584132707. 3
485584132708. 4

Question Number : 13 Question Id : 48558433178 Question Type : MCQ Option Shuffling : No Is Question Mandatory : No Calculator : None Response Time : N.A Think Time : N.A Minimum Instruction Time : 0

Correct Marks : 5 Wrong Marks : 1

Question Key Details :

Key	Value
Comprehension	Comp3

Supposing you have to make a payment of Rs.100, you can do so in rupees-coins; but it would be cumbersome to pay in nickel or copper coins, because they are heavy to carry and also because it takes much time to count them. The government therefore permits you to make the payment in rupee-notes. What are these rupee notes really? They are kind of money, right enough, although they are made of paper instead of metal. You can use them in just the same way that you use ordinary money. The reason why they are made of paper and used is that they save the trouble of carrying metal coins about-of course, paper is lighter than metal-and they also save using silver and other metals when they are scarce.

What makes these mere pieces of of paper bear the value of the number of rupees that is printed upon them? Why should a piece of paper, with "100" printed on it be worth twenty times as much as a piece of paper with "five" printed on it-and also worth a hundred times as much as a silver rupee-coin? The reason is that Government guarantees that the piece of paper is worth the amount printed an it and promised to pay that amount to any body who wishes to exchange this paper for the rupee-coins. Also, if you think about it you can easily realize that crores and crores more of rupee-coins would have to be minted, if all paper-money were abolished.

Perhaps you may ask, "Then why not have paper money only?" Why use silver and Nickle and copper at all? The answer is-because money must, as we have already said, be something so useful that everyone wants. Also because the metals are the best form of money; and thirdly because it would be impossible to print just the right amount of paper money that would keep prices at their proper natural level. If any Government prints too much paper money, then prices go up at once. The supply of money is increased and therefore its value (in food, clothes, books, houses, land, tools and everything else) goes down.

You may think at first that it is queer to talk of having too much paper money and the money is so nice and useful that you cannot have too much of it. But if you think that, I an afraid you are forgetting that money is only useful for what it will buy; so it is no good at all having more money if there are no more things to buy with it. The more money there is , the higher will be the prices of everything. The same thing happens with rupee-coins as with paper money. But it is not likely to happen, for this reason: it is very easy to print a great deal of paper money, but not at all easy to increase the amount there is if it keeps very steady and changes very little. In fact that is one of the chief reasons why it was chosen to make coins of.

_____ are the best form of money

1. paper-notes
2. metals
3. nickel coins
4. copper coins

Options :

- 485584132709. 1
- 485584132710. 2
- 485584132711. 3
- 485584132712. 4

Question Number : 14 Question Id : 48558433179 Question Type : MCQ Option Shuffling : No Is Question Mandatory : No Calculator : None Response Time : N.A Think Time : N.A Minimum Instruction Time : 0

Correct Marks : 5 Wrong Marks : 1

Question Key Details :

Key	Value
Comprehension	Comp3

Supposing you have to make a payment of Rs.100, you can do so in rupees-coins; but it would be cumbersome to pay in nickel or copper coins, because they are heavy to carry and also because it takes much time to count them. The government therefore permits you to make the payment in rupee-notes. What are these rupee notes really? They are kind of money, right enough, although they are made of paper instead of metal. You can use them in just the same way that you use ordinary money. The reason why they are made of paper and used is that they save the trouble of carrying metal coins about-of course, paper is lighter than metal-and they also save using silver and other metals when they are scarce.

What makes these mere pieces of of paper bear the value of the number of rupees that is printed upon them? Why should a piece of paper, with "100" printed on it be worth twenty times as much as a piece of paper with "five" printed on it-and also worth a hundred times as much as a silver rupee-coin? The reason is that Government guarantees that the piece of paper is worth the amount printed an it and promised to pay that amount to any body who wishes to exchange this paper for the rupee-coins. Also, if you think about it you can easily realize that crores and crores more of rupee-coins would have to be minted, if all paper-money were abolished.

Perhaps you may ask, "Then why not have paper money only?" Why use silver and Nickle and copper at all? The answer is-because money must, as we have already said, be something so useful that everyone wants. Also because the metals are the best form of money; and thirdly because it would be impossible to print just the right amount of paper money that would keep prices at their proper natural level. It any Government prints too much paper money, then prices go up at once. The supply of money is increased and therefore its value (in food, clothes, books, houses, land, tools and everything else) goes down.

You may think at first that it is queer to talk of having too much paper money and the money is so nice and useful that you cannot have too much of it. But if you think that, I an afraid you are forgetting that money is only useful for what it will buy; so it is no good at all having more money if there are no more things to buy with it. The more money there is , the higher will be the prices of everything. The same thing happens with rupee-coins as with paper money. But it is not likely to happen, for this reason: it is very easy to print a great deal of paper money, but not at all easy to increase the amount there is if it keeps very steady and changes very little. In fact that is one of the chief reasons why it was chosen to make coins of.

If the government prints too much paper money, then prices _____ at once

1. go up
2. go down
3. remain stable
4. don't change

Options :

- 485584132713. 1
- 485584132714. 2
- 485584132715. 3
- 485584132716. 4

Question Number : 15 Question Id : 48558433180 Question Type : MCQ Option Shuffling : No Is Question Mandatory : No Calculator : None Response Time : N.A Think Time : N.A Minimum Instruction Time : 0

Correct Marks : 5 Wrong Marks : 1

Question Key Details :

Key	Value
Comprehension	Comp3

Supposing you have to make a payment of Rs.100, you can do so in rupees-coins; but it would be cumbersome to pay in nickel or copper coins, because they are heavy to carry and also because it takes much time to count them. The government therefore permits you to make the payment in rupee-notes. What are these rupee notes really? They are kind of money, right enough, although they are made of paper instead of metal. You can use them in just the same way that you use ordinary money. The reason why they are made of paper and used is that they save the trouble of carrying metal coins about-of course, paper is lighter than metal-and they also save using silver and other metals when they are scarce.

What makes these mere pieces of of paper bear the value of the number of rupees that is printed upon them? Why should a piece of paper, with "100" printed on it be worth twenty times as much as a piece of paper with "five" printed on it-and also worth a hundred times as much as a silver rupee-coin? The reason is that Government guarantees that the piece of paper is worth the amount printed an it and promised to pay that amount to any body who wishes to exchange this paper for the rupee-coins. Also, if you think about it you can easily realize that crores and crores more of rupee-coins would have to be minted, if all paper-money were abolished.

Perhaps you may ask, "Then why not have paper money only?" Why use silver and Nickle and copper at all? The answer is-because money must, as we have already said, be something so useful that everyone wants. Also because the metals are the best form of money; and thirdly because it would be impossible to print just the right amount of paper money that would keep prices at their proper natural level. If any Government prints too much paper money, then prices go up at once. The supply of money is increased and therefore its value (in food, clothes, books, houses, land, tools and everything else) goes down.

You may think at first that it is queer to talk of having too much paper money and the money is so nice and useful that you cannot have too much of it. But if you think that, I an afraid you are forgetting that money is only useful for what it will buy; so it is no good at all having more money if there are no more things to buy with it. The more money there is , the higher will be the prices of everything. The same thing happens with rupee-coins as with paper money. But it is not likely to happen, for this reason: it is very easy to print a great deal of paper money, but not at all easy to increase the amount there is if it keeps very steady and changes very little. In fact that is one of the chief reasons why it was chosen to make coins of.

The more money there is _____ will be the prices of everything.

1. the lesser
2. the higher
3. the better
4. the worse

Options :

- 485584132717. 1
- 485584132718. 2
- 485584132719. 3
- 485584132720. 4

Sub-Section Number : 4
Sub-Section Id : 4855842405
Question Shuffling Allowed : Yes
Is Section Default? : null

Question Number : 16 Question Id : 48558433181 Question Type : MCQ Option Shuffling : No Is Question Mandatory : No Calculator : None Response Time : N.A Think Time : N.A Minimum Instruction Time : 0 Correct Marks : 5 Wrong Marks : 1

Question Key Details :

Key	Value
Comprehension	MCQ

Match List I with List II

Fill in the blanks with appropriate modals from in the sentences given in the list

LIST I		LIST II	
A.	_____ I go now?	I.	shall
B.	We _____ learn swimming	II.	can
C.	You _____ reach home before dark	III.	should
D.	We _____ discuss this matter tomorrow	IV.	ought to

Choose the correct answer from the options given below:

1. A-II, B-III, C-IV, D-I
2. A-I, B-II, C-III, D-IV
3. A-I, B-III, C-IV, D-I
4. A-III, B-IV, C-II, D-I

Options :

485584132721. 1
 485584132722. 2
 485584132723. 3
 485584132724. 4

Question Number : 17 Question Id : 48558433182 Question Type : MCQ Option Shuffling : No Is Question Mandatory : No Calculator : None Response Time : N.A Think Time : N.A Minimum Instruction Time : 0

Correct Marks : 5 Wrong Marks : 1

Question Key Details :

Key	Value
Comprehension	MCQ

Fill in the most appropriate modal from the given options

Measles _____ be quite dangerous

1. could
2. can
3. should
4. would

Options :

485584132725. 1
 485584132726. 2
 485584132727. 3
 485584132728. 4

Question Number : 18 Question Id : 48558433183 Question Type : MCQ Option Shuffling : No Is Question Mandatory : No Calculator : None Response Time : N.A Think Time : N.A Minimum Instruction Time : 0

Correct Marks : 5 Wrong Marks : 1

Question Key Details :

Key	Value
Comprehension	MCQ

Spot the error in the following sentence

1. It is often said that
2. some men are born great
3. some achieve greatness and
4. some had greatness threst on them

Options :

- 485584132729. 1
- 485584132730. 2
- 485584132731. 3
- 485584132732. 4

Question Number : 19 Question Id : 48558433184 Question Type : MCQ Option Shuffling : No Is Question Mandatory : No Calculator : None Response Time : N.A Think Time : N.A Minimum Instruction Time : 0

Correct Marks : 5 Wrong Marks : 1

Question Key Details :

Key	Value
Comprehension	MCQ

Change the voice of the following sentence from active to passive:

"I opened the window"

Choose the most appropriate option:

1. I was the one who opened option the window
2. The window was opened and I did it.
3. The window was by I.
4. The window was opened by me.

Options :

- 485584132733. 1
- 485584132734. 2
- 485584132735. 3
- 485584132736. 4

Question Number : 20 Question Id : 48558433185 Question Type : MCQ Option Shuffling : No Is Question Mandatory : No Calculator : None Response Time : N.A Think Time : N.A Minimum Instruction Time : 0

Correct Marks : 5 Wrong Marks : 1

Question Key Details :

Key	Value
Comprehension	MCQ

Change the voice of the following sentence from the passive to Active

"The essay was edited by the professor."

1. The professor found the essay and edited it.
2. The professor edited the essay.
3. The professor edited something which was the essay.
4. The professor was edited by the essay.

Options :

- 485584132737. 1
- 485584132738. 2
- 485584132739. 3
- 485584132740. 4

Question Number : 21 Question Id : 48558433186 Question Type : MCQ Option Shuffling : No Is Question Mandatory : No Calculator : None Response Time : N.A Think Time : N.A Minimum Instruction Time : 0

Correct Marks : 5 Wrong Marks : 1

Question Key Details :

Key	Value
Comprehension	MCQ

Choose the most appropriate meaning of the following foreign word: "nom de plume"

1. Plumage of a bird
2. Last resort
3. Pen-name
4. Method of operating

Options :

- 485584132741. 1
- 485584132742. 2
- 485584132743. 3
- 485584132744. 4

Question Number : 22 Question Id : 48558433187 Question Type : MCQ Option Shuffling : No Is Question Mandatory : No Calculator : None Response Time : N.A Think Time : N.A Minimum Instruction Time : 0

Correct Marks : 5 Wrong Marks : 1

Question Key Details :

Key	Value
Comprehension	MCQ

Match the words in List I with their meanings in List II

LIST I		LIST II	
A.	Mandate	I.	reward
B.	recompense	II.	comfort in time of distress
C.	Solace	III.	an official order to do something
D.	Tatters	IV.	torn pieces of cloth or paper

Choose the correct answer from the options given below:

1. A-I, B-II, C-IV, D-III
2. A-II, B-III, C-I, D-IV
3. A-III, B-I, C-II, D-IV
4. A-IV, B-III, C-II, D-I

Options :

485584132745. 1
485584132746. 2
485584132747. 3
485584132748. 4

Question Number : 23 Question Id : 48558433188 Question Type : MCQ Option Shuffling : No Is Question Mandatory : No Calculator : None Response Time : N.A Think Time : N.A Minimum Instruction Time : 0

Correct Marks : 5 Wrong Marks : 1

Question Key Details :

Key	Value
Comprehension	MCQ

Choose the most appropriate meaning of the following foreign word: "Papier mache"

1. Paper mixed with glue
2. Paper mixed with metal
3. Paper mixed with soil
4. Paper mixed with charcoal

Options :

485584132749. 1
485584132750. 2
485584132751. 3
485584132752. 4

Question Number : 24 Question Id : 48558433189 Question Type : MCQ Option Shuffling : No Is Question Mandatory : No Calculator : None Response Time : N.A Think Time : N.A Minimum Instruction Time : 0

Correct Marks : 5 Wrong Marks : 1

Question Key Details :

Key	Value
Comprehension	MCQ

Change the following sentence from Direct speech to Indirect Speech:
The coach promised, " If you will come before school tomorrow, I will teach it,"

Choose appropriate option.

1. The coach promised to meet me after school and teach it.
2. The coach promised that if came before school the next day, he would teach it to me.
3. The coach promised to come before school and teach it to me.
4. The coach promised that I will be thought before school if I came

Options :

- 485584132753. 1
- 485584132754. 2
- 485584132755. 3
- 485584132756. 4

Question Number : 25 Question Id : 48558433190 Question Type : MCQ Option Shuffling : No Is Question Mandatory : No Calculator : None Response Time : N.A Think Time : N.A Minimum Instruction Time : 0

Correct Marks : 5 Wrong Marks : 1

Question Key Details :

Key	Value
Comprehension	MCQ

Change the following sentence from Indirect speech to Direct Speech.

She said, "Bravo! You did better than last time"

Choose the most appropriate option:

1. She applauded him, saying that he had done better than last time.
2. She said bravo to him and pointed out that he had done better than last time.
3. She was happy that he had done better than last time.
4. She could not believe that he had done better than last time and said bravo to him.

Options :

- 485584132757. 1
- 485584132758. 2
- 485584132759. 3
- 485584132760. 4

Question Number : 26 Question Id : 48558433191 Question Type : MCQ Option Shuffling : No Is Question Mandatory : No Calculator : None Response Time : N.A Think Time : N.A Minimum Instruction Time : 0

Correct Marks : 5 Wrong Marks : 1

Question Key Details :

Key	Value
Comprehension	MCQ

Choose the most appropriate synonym for the following word: "Alarm"

1. Foresee
2. Sleep
3. Awake
4. Shock

Options :

485584132761. 1
485584132762. 2
485584132763. 3
485584132764. 4

Question Number : 27 Question Id : 48558433192 Question Type : MCQ Option Shuffling : No Is Question Mandatory : No Calculator : None Response Time : N.A Think Time : N.A Minimum Instruction Time : 0

Correct Marks : 5 Wrong Marks : 1

Question Key Details :

Key	Value
Comprehension	MCQ

Choose the best option to convert the given exclamatory sentence is to Assertive sentence:-

How stupid of me to forget your name!

1. It is stupid of me to forget your name
2. I wonder how can I be stupid to forget your name
3. I can never be stupid to forget your name
4. Forgetting your name is my stupid behaviour

Options :

485584132765. 1
485584132766. 2
485584132767. 3
485584132768. 4

Question Number : 28 Question Id : 48558433193 Question Type : MCQ Option Shuffling : No Is Question Mandatory : No Calculator : None Response Time : N.A Think Time : N.A Minimum Instruction Time : 0

Correct Marks : 5 Wrong Marks : 1

Question Key Details :

Key	Value
Comprehension	MCQ

Choose the best option to convert the given assertive sentence in to exclamatory sentence:-

I wish I knew more people here

1. If only I knew more people here!
2. Oh! I knew more people here.
3. What a pity to have known more people here!
4. Alas! I could have known more people here.

Options :

- 485584132769. 1
- 485584132770. 2
- 485584132771. 3
- 485584132772. 4

Question Number : 29 Question Id : 48558433194 Question Type : MCQ Option Shuffling : No Is Question Mandatory : No Calculator : None Response Time : N.A Think Time : N.A Minimum Instruction Time : 0

Correct Marks : 5 Wrong Marks : 1

Question Key Details :

Key	Value
Comprehension	MCQ

Match List I with List II

Fill in appropriate modals from list II in The sentences in List I.

LIST I		LIST II	
A.	No one _____ question the ways of God.	I.	Could
B.	How _____ you should at your parents?	II.	Would
C.	_____ you like to have breakfast with me?	III.	can
D.	We _____ respect our elders	IV.	ought to

Choose the correct answer from the options given below:

1. A-I, B-II, C-III, D-IV
2. A-II, B-III, C-I, D-IV
3. A-III, B-I, C-II, D-IV
4. A-IV, B-III, C-I, D-II

Options :

- 485584132773. 1
- 485584132774. 2
- 485584132775. 3
- 485584132776. 4

Question Number : 30 Question Id : 48558433195 Question Type : MCQ Option Shuffling : No Is Question Mandatory : No Calculator : None Response Time : N.A Think Time : N.A Minimum Instruction Time : 0

Correct Marks : 5 Wrong Marks : 1

Question Key Details :

Key	Value
Comprehension	MCQ

Fill in correct modals in the given sentence from the given options:-

I wish I _____ help you, but I have no money.

1. may
2. could
3. might
4. can

Options :

- 485584132777. 1
- 485584132778. 2
- 485584132779. 3
- 485584132780. 4

Question Number : 31 Question Id : 48558433196 Question Type : MCQ Option Shuffling : No Is Question Mandatory : No Calculator : None Response Time : N.A Think Time : N.A Minimum Instruction Time : 0

Correct Marks : 5 Wrong Marks : 1

Question Key Details :

Key	Value
Comprehension	MCQ

Which of the following is an appropriate subscription for a formal letter?

Choose from the options given below:

1. Yours sincerely
2. Yours lovingly
3. Yours forever
4. Your dear friend

Options :

- 485584132781. 1
- 485584132782. 2
- 485584132783. 3
- 485584132784. 4

Question Number : 32 Question Id : 48558433197 Question Type : MCQ Option Shuffling : No Is Question Mandatory : No Calculator : None Response Time : N.A Think Time : N.A Minimum Instruction Time : 0

Correct Marks : 5 Wrong Marks : 1

Question Key Details :

Key	Value
Comprehension	MCQ

Which of the following elements are Not found in informal letters?

Choose from the options given below:

1. Signature
2. Date
3. Salutation or Courteous greeting
4. Subject

Options :

- 485584132785. 1
- 485584132786. 2
- 485584132787. 3
- 485584132788. 4

Question Number : 33 Question Id : 48558433198 Question Type : MCQ Option Shuffling : No Is Question Mandatory : No Calculator : None Response Time : N.A Think Time : N.A Minimum Instruction Time : 0

Correct Marks : 5 Wrong Marks : 1

Question Key Details :

Key	Value
Comprehension	MCQ

Which of the following pair of words are not homonyms:

1. cite, site
2. pallet, palate
3. burn, burden
4. hear, here

Options :

- 485584132789. 1
- 485584132790. 2
- 485584132791. 3
- 485584132792. 4

Question Number : 34 Question Id : 48558433199 Question Type : MCQ Option Shuffling : No Is Question Mandatory : No Calculator : None Response Time : N.A Think Time : N.A Minimum Instruction Time : 0

Correct Marks : 5 Wrong Marks : 1

Question Key Details :

Key	Value
Comprehension	MCQ

Rearrange the following jumbled phrases into a coherent sentence

- A. A given trait whenever they are present
- B. Among heterogenous organisms,
- C. Meaning that they result in the expression of
- D. Some adults are dominant

- 1. ACDB
- 2. BDCA
- 3. DACB
- 4. CDAB

Options :

- 485584132793. 1
- 485584132794. 2
- 485584132795. 3
- 485584132796. 4

Question Number : 35 Question Id : 48558433200 Question Type : MCQ Option Shuffling : No Is Question Mandatory : No Calculator : None Response Time : N.A Think Time : N.A Minimum Instruction Time : 0

Correct Marks : 5 Wrong Marks : 1

Question Key Details :

Key	Value
Comprehension	MCQ

Rearrange the following jumbled phrases into a coherent sentence

- A. as Annu is senior than Susan
- B. though Susan had worked there before Annu
- C. Annu received the promotion instead of Susan
- D. in age

- 1. ABCD
- 2. DBAC
- 3. CADB
- 4. BACD

Options :

- 485584132797. 1
- 485584132798. 2
- 485584132799. 3
- 485584132800. 4

Question Number : 36 Question Id : 48558433201 Question Type : MCQ Option Shuffling : No Is Question Mandatory : No Calculator : None Response Time : N.A Think Time : N.A Minimum Instruction Time : 0

Correct Marks : 5 Wrong Marks : 1

Question Key Details :

Key	Value
Comprehension	MCQ

The given sentence is divided into three parts. Scan it carefully for errors and choose the most appropriate options

A) I found less | B) books in the| C) library than that

1. A only
2. B and C
3. C only
4. No error

Options :

- 485584132801. 1
- 485584132802. 2
- 485584132803. 3
- 485584132804. 4

Question Number : 37 Question Id : 48558433202 Question Type : MCQ Option Shuffling : No Is Question Mandatory : No Calculator : None Response Time : N.A Think Time : N.A Minimum Instruction Time : 0

Correct Marks : 5 Wrong Marks : 1

Question Key Details :

Key	Value
Comprehension	MCQ

The given sentence is divided into tissue parts. scan it carefully for errors and choose the most appropriate options

- A) Few persons
B) are free
C) from worries

1. A only
2. A and C
3. C only
4. No errors

Options :

- 485584132805. 1
- 485584132806. 2
- 485584132807. 3
- 485584132808. 4

Question Number : 38 Question Id : 48558433203 Question Type : MCQ Option Shuffling : No Is Question Mandatory : No Calculator : None Response Time : N.A Think Time : N.A Minimum Instruction Time : 0

Correct Marks : 5 Wrong Marks : 1

Question Key Details :

Key	Value
Comprehension	MCQ

Identify the option that demonstrates the most appropriate usage of an adjective clause.

1. She is senior and most intelligent than her friend.
2. Meera adopted a Two-years- old girl.
3. This tree is to big as the other tree.
4. She took a six-week course.

Options :

- 485584132809. 1
- 485584132810. 2
- 485584132811. 3
- 485584132812. 4

Question Number : 39 Question Id : 48558433204 Question Type : MCQ Option Shuffling : No Is Question Mandatory : No Calculator : None Response Time : N.A Think Time : N.A Minimum Instruction Time : 0

Correct Marks : 5 Wrong Marks : 1

Question Key Details :

Key	Value
Comprehension	MCQ

Choose the options which demonstrates an appropriate usage of articles.

1. She would make a better statesman than philosopher
2. She would make better statesman than philosopher
3. She would make a better statesman than a philosopher
4. She would makes better statesman than a philosopher

Options :

- 485584132813. 1
- 485584132814. 2
- 485584132815. 3
- 485584132816. 4

Question Number : 40 Question Id : 48558433205 Question Type : MCQ Option Shuffling : No Is Question Mandatory : No Calculator : None Response Time : N.A Think Time : N.A Minimum Instruction Time : 0

Correct Marks : 5 Wrong Marks : 1

Question Key Details :

Key	Value
Comprehension	MCQ

Which of the following sentences demonstrate appropriate use(s) of asterisks

1. The third and fourth chapter will be tested in exam
2. The third and fourth chapters will be tested in the exam
3. Third and fourth chapter will be tested in the exam
4. The third and fourth chapters will be tested in the exam

Options :

- 485584132817. 1
- 485584132818. 2
- 485584132819. 3
- 485584132820. 4

Question Number : 41 Question Id : 48558433206 Question Type : MCQ Option Shuffling : No Is Question Mandatory : No Calculator : None Response Time : N.A Think Time : N.A Minimum Instruction Time : 0

Correct Marks : 5 Wrong Marks : 1

Question Key Details :

Key	Value
Comprehension	MCQ

Fill in the blanks with the most appropriate adverbs.

Does she sing well? _____ she does

1. Yes
2. of course
3. I think
4. Certainly

Options :

- 485584132821. 1
- 485584132822. 2
- 485584132823. 3
- 485584132824. 4

Question Number : 42 Question Id : 48558433207 Question Type : MCQ Option Shuffling : No Is Question Mandatory : No Calculator : None Response Time : N.A Think Time : N.A Minimum Instruction Time : 0

Correct Marks : 5 Wrong Marks : 1

Question Key Details :

Key	Value
Comprehension	MCQ

Read the following sentence care. Some part of the sentence may have an error. Choose the most appropriate options.

Mumbai (A) | is New York (B) | of India (c)

1. A
2. B
3. C
4. No error

Options :

485584132825. 1
485584132826. 2
485584132827. 3
485584132828. 4

Question Number : 43 Question Id : 48558433208 Question Type : MCQ Option Shuffling : No Is Question Mandatory : No Calculator : None Response Time : N.A Think Time : N.A Minimum Instruction Time : 0

Correct Marks : 5 Wrong Marks : 1

Question Key Details :

Key	Value
Comprehension	MCQ

Match List I with List II

LIST I		LIST II	
A.	Wherefore	I.	adverb of reason
B.	seriously	II.	adverb of degree
C.	probably	III.	interrogative adverb
D.	consequently	IV.	adverb of affirmation

Choose the correct answer from the options given below:

1. A-IV, B-III, C-II, D-I
2. A-III, B-I, C-IV, D-II
3. A-III, B-II, C-IV, D-I
4. A-I, B-II, C-IV, D-IV

Options :

485584132829. 1
485584132830. 2
485584132831. 3
485584132832. 4

Question Number : 44 Question Id : 48558433209 Question Type : MCQ Option Shuffling : No Is Question Mandatory : No Calculator : None Response Time : N.A Think Time : N.A Minimum Instruction Time : 0

Correct Marks : 5 Wrong Marks : 1

Question Key Details :

Key	Value
Comprehension	MCQ

Rearrange the following sentences to form a coherent paragraph

- A. Because, if the manager's subordinates are inefficient and ineffective and are not helped to increase their efficiency and effectiveness, the task may not be achieved.
- B. This may be just as true as the responsibility for achieving prescribed tasks.
- C. If it is achieved at too great a cost, or at the risk of other effects many of which are less obvious.
- D. It is often said that one of the prime responsibilities of a manager is the training and development of staff

1. CBAD

2. DBAC

3. DCAB

4. CDAB

Options :

485584132833. 1

485584132834. 2

485584132835. 3

485584132836. 4

Question Number : 45 Question Id : 48558433210 Question Type : MCQ Option Shuffling : No Is Question Mandatory : No Calculator : None Response Time : N.A Think Time : N.A Minimum Instruction Time : 0

Correct Marks : 5 Wrong Marks : 1

Question Key Details :

Key	Value
Comprehension	MCQ

Choose the most appropriate antonym of the given word: UPROARIOUS

1. calm

2. Tumultuous

3. bleating

4. upright

Options :

485584132837. 1

485584132838. 2

485584132839. 3

485584132840. 4

Question Number : 46 Question Id : 48558433211 Question Type : MCQ Option Shuffling : No Is Question Mandatory : No Calculator : None Response Time : N.A Think Time : N.A Minimum Instruction Time : 0

Correct Marks : 5 Wrong Marks : 1

Question Key Details :

Key	Value
-----	-------

Match List I with List II Antonyms

LIST I		LIST II	
A.	luminous	I.	initially
B.	eventually	II.	supercilious
C.	subservient	III.	unholy
D.	sacrosant	IV.	dark

Choose the correct answer from the options given below:

1. A-IV, B-III, C-II, D-I
2. A-III, B-II, C-I, D-IV
3. A-IV, B-I, C-II, D-III
4. A-I, B-III, C-II, D-IV

Options :

485584132841. 1
 485584132842. 2
 485584132843. 3
 485584132844. 4

Question Number : 47 Question Id : 48558433212 Question Type : MCQ Option Shuffling : No Is Question Mandatory : No Calculator : None Response Time : N.A Think Time : N.A Minimum Instruction Time : 0

Correct Marks : 5 Wrong Marks : 1

Question Key Details :

Key	Value
Comprehension	MCQ

Fill in the blanks with the most appropriate prepositions

I prefer tea _____ coffee

1. with
2. to
3. over
4. of

Options :

485584132845. 1
 485584132846. 2
 485584132847. 3
 485584132848. 4

Question Number : 48 Question Id : 48558433213 Question Type : MCQ Option Shuffling : No Is Question Mandatory : No Calculator : None Response Time : N.A Think Time : N.A Minimum Instruction Time : 0

Correct Marks : 5 Wrong Marks : 1

Question Key Details :

Key	Value
Comprehension	MCQ

The soldiers were _____ war

1. at
2. in
3. on
4. of

Options :

485584132849. 1
 485584132850. 2
 485584132851. 3
 485584132852. 4

Question Number : 49 Question Id : 48558433214 Question Type : MCQ Option Shuffling : No Is Question Mandatory : No Calculator : None Response Time : N.A Think Time : N.A Minimum Instruction Time : 0

Correct Marks : 5 Wrong Marks : 1

Question Key Details :

Key	Value
Comprehension	MCQ

Match the phrasal words with most appropriate meaning

LIST I		LIST II	
A.	draw up	I.	make someone sad or depressed
B.	drag out	II.	prepare and write something
C.	drag down	III.	use a resource to do something
D.	draw on	IV.	make something longer than necessary

Choose the correct answer from the options given below:

1. A-II, B-IV, C-I, D-III
2. A-I, B-II, C-III, D-IV
3. A-II, B-IV, C-III, D-I
4. A-I, B-II, C-IV, D-III

Options :

485584132853. 1
 485584132854. 2
 485584132855. 3
 485584132856. 4

Question Number : 50 Question Id : 48558433215 Question Type : MCQ Option Shuffling : No Is Question Mandatory : No Calculator : None Response Time : N.A Think Time : N.A Minimum Instruction Time : 0

Correct Marks : 5 Wrong Marks : 1

Question Key Details :

Key	Value
Comprehension	MCQ

Match the idioms with most appropriate meaning

LIST I		LIST II	
A.	fish out of water	I.	good luck
B.	break a leg	II.	someone about whom very little is known
C.	leave in the lurch	III.	to be put in an unfamiliar situation
D.	dark horse	IV.	abandon someone in a difficult situation

Choose the correct answer from the options given below:

1. A-III, B-IV, C-II, D-I
2. A-III, B-I, C-IV, D-II
3. A-I, B-III, C-IV, D-II
4. A-II, B-I, C-I, D-IV

Options :

485584132857. 1
 485584132858. 2
 485584132859. 3
 485584132860. 4

Hindi

Group Number :	2
Group Id :	485584740
Group Maximum Duration :	45
Group Minimum Duration :	45
Show Attended Group? :	No
Edit Attended Group? :	No
Break time :	0
Group Marks :	200
Is this Group for Examiner? :	No
Examiner permission :	Cant View
Show Progress Bar? :	No

Hindi

Section Id :	485584854
Section Number :	1
Section type :	Online
Mandatory or Optional :	Mandatory
Number of Questions :	50
Number of Questions to be attempted :	40
Section Marks :	200
Enable Mark as Answered Mark for Review and Clear Response :	Yes

Maximum Instruction Time :	0
Sub-Section Number :	1
Sub-Section Id :	4855842406
Question Shuffling Allowed :	No
Is Section Default? :	null
Sub-Section Number :	2
Sub-Section Id :	4855842407
Question Shuffling Allowed :	No
Is Section Default? :	null
Sub-Section Number :	3
Sub-Section Id :	4855842408
Question Shuffling Allowed :	No
Is Section Default? :	null
Sub-Section Number :	4
Sub-Section Id :	4855842409
Question Shuffling Allowed :	Yes
Is Section Default? :	null

Assamese

Group Number :	3
Group Id :	485584741
Group Maximum Duration :	45
Group Minimum Duration :	45
Show Attended Group? :	No
Edit Attended Group? :	No
Break time :	0
Group Marks :	200
Is this Group for Examiner? :	No
Examiner permission :	Cant View
Show Progress Bar? :	No

Assamese

Section Id :	485584855
Section Number :	1
Section type :	Online
Mandatory or Optional :	Mandatory
Number of Questions :	50
Number of Questions to be attempted :	40
Section Marks :	200
Enable Mark as Answered Mark for Review and Clear Response :	Yes
Maximum Instruction Time :	0
Sub-Section Number :	1
Sub-Section Id :	4855842410
Question Shuffling Allowed :	No
Is Section Default? :	null
Sub-Section Number :	2
Sub-Section Id :	4855842411
Question Shuffling Allowed :	No
Is Section Default? :	null
Sub-Section Number :	3

Sub-Section Id :	4855842412
Question Shuffling Allowed :	No
Is Section Default? :	null
Sub-Section Number :	4
Sub-Section Id :	4855842413
Question Shuffling Allowed :	Yes
Is Section Default? :	null

Kannada

Group Number :	4
Group Id :	485584742
Group Maximum Duration :	45
Group Minimum Duration :	45
Show Attended Group? :	No
Edit Attended Group? :	No
Break time :	0
Group Marks :	200
Is this Group for Examiner? :	No
Examiner permission :	Cant View
Show Progress Bar? :	No

Kannada

Section Id :	485584856
Section Number :	1
Section type :	Online
Mandatory or Optional :	Mandatory
Number of Questions :	50
Number of Questions to be attempted :	40
Section Marks :	200
Enable Mark as Answered Mark for Review and Clear Response :	Yes
Maximum Instruction Time :	0
Sub-Section Number :	1
Sub-Section Id :	4855842414
Question Shuffling Allowed :	No
Is Section Default? :	null
Sub-Section Number :	2
Sub-Section Id :	4855842415
Question Shuffling Allowed :	No
Is Section Default? :	null
Sub-Section Number :	3
Sub-Section Id :	4855842416
Question Shuffling Allowed :	No
Is Section Default? :	null
Sub-Section Number :	4
Sub-Section Id :	4855842417
Question Shuffling Allowed :	Yes
Is Section Default? :	null

Japanese

Group Number : 5
Group Id : 485584743
Group Maximum Duration : 45
Group Minimum Duration : 45
Show Attended Group? : No
Edit Attended Group? : No
Break time : 0
Group Marks : 200
Is this Group for Examiner? : No
Examiner permission : Cant View
Show Progress Bar? : No

Japanese

Section Id : 485584857
Section Number : 1
Section type : Online
Mandatory or Optional : Mandatory
Number of Questions : 50
Number of Questions to be attempted : 40
Section Marks : 200
Enable Mark as Answered Mark for Review and Clear Response : Yes
Maximum Instruction Time : 0
Sub-Section Number : 1
Sub-Section Id : 4855842418
Question Shuffling Allowed : No
Is Section Default? : null

Question Number : 51 Question Id : 48558433366 Question Type : MCQ Option Shuffling : No Is Question Mandatory :

No Calculator : None Response Time : N.A Think Time : N.A Minimum Instruction Time : 0

Correct Marks : 5 Wrong Marks : 1

Question Key Details :

Key	Value
Comprehension	Comp1

Read the following passage and answer the questions given below

中村 : 来月からどくしんです。

アヌ : えっ?

中村 : 実は おおさかの 本社に てんきなんんです。

アヌ : 本社ですか。それは おめでとう ございます。

でも、どうして どくしんに なるんですか。

中村 : つまど 子供は 東京に のこるんです。

アヌ : えっ、いっしょに 行かないんですか。

中村 : ええ。むすこは 来年 大学の 入学試験が あるから、東京に

のこると 言うし、つまも 今の会社を やめたくないと

言うんです。

アヌ : それで、別々に すむんですね。

中村 : ええ、でも、月に、2、3回 週末に 帰る つもりです。

アヌ : 大変ですね。

中村 : でも、いいチャンスですから、りょうりを 習おうと 思って

います。

アヌ : それはいいですね。

Please fill in the blank to complete the sentence

来月から _____です。

1. ときどき
2. ときどき
3. どくしん
4. りょうしん

Options :

- 485584133461. 1
- 485584133462. 2
- 485584133463. 3
- 485584133464. 4

Question Number : 52 Question Id : 48558433367 Question Type : MCQ Option Shuffling : No Is Question Mandatory : No Calculator : None Response Time : N.A Think Time : N.A Minimum Instruction Time : 0

Correct Marks : 5 Wrong Marks : 1

Question Key Details :

Key	Value
Comprehension	Compl

Read the following passage and answer the questions given below

中村 : 来月からどくしんです。

アヌ : えっ?

中村 : 実は おおさかの 本社に てんきんなんです。

アヌ : 本社ですか。それは おめでとう ございます。

でも、どうして どくしんに なるんですか。

中村 : つまと 子供は 東京に のこるんです。

アヌ : えっ、いっしょに 行かないんですか。

中村 : ええ。むすこは 来年 大学の 入学試験が あるから、東京に

のこると 言うし、つまも 今の会社を やめたくない

言うんです。

アヌ : それで、別々に すむんですね。

中村 : ええ、でも、月に、2、3回 週末に 帰る つもりです。

アヌ : 大変ですね。

中村 : でも、いいチャンスですから、りょうりを 習おうと 思って

います。

アヌ : それはいいですね。

Please choose the correct answer

1. なかむらさんとおくさんは東京にのこります。
2. つまと子供はかがいりょこうにいきます。
3. つまと子供はおおさかにすみます。
4. つまと子供は東京にのこります。

Options :

485584133465. 1

485584133466. 2

485584133467. 3

485584133468. 4

Question Number : 53 Question Id : 48558433368 Question Type : MCQ Option Shuffling : No Is Question Mandatory : No Calculator : None Response Time : N.A Think Time : N.A Minimum Instruction Time : 0

Correct Marks : 5 Wrong Marks : 1

Question Key Details :

Key	Value
Comprehension	Comp1

Read the following passage and answer the questions given below

中村 : 来月からどくしんです。

アヌ : えっ?

中村 : 実は おおさかの 本社に てんきんなんです。

アヌ : 本社ですか。それは おめでとう ございます。

でも、どうして どくしんに なるんですか。

中村 : つまと 子供は 東京に のこるんです。

アヌ : えっ、いっしょに 行かないんですか。

中村 : ええ。むすこは 来年 大学の 入学試験が あるから、東京に

のこると 言うし、つまも 今の会社を やめたくない

言うんです。

アヌ : それで、別々に すむんですね。

中村 : ええ、でも、月に、2、3回 週末に 帰る つもりです。

アヌ : 大変ですね。

中村 : でも、いいチャンスですから、りょうりを 習おうと 思って

います。

アヌ : それはいいですね。

どうしてつまは とうきょうにのこりますか。

1. いまのかいしゃをやめたくないです。
2. いまのがっこうをやめたくないです。
3. ひとりですんでみたいです。
4. りょこうしたいです。

Options :

- 485584133469. 1
- 485584133470. 2
- 485584133471. 3
- 485584133472. 4

Question Number : 54 Question Id : 48558433369 Question Type : MCQ Option Shuffling : No Is Question Mandatory : No Calculator : None Response Time : N.A Think Time : N.A Minimum Instruction Time : 0
Correct Marks : 5 Wrong Marks : 1
Question Key Details :

Key	Value
Comprehension	Comp1

Read the following passage and answer the questions given below

中村 : 来月からどくしんです。

アヌ : えっ?

中村 : 実は おおさかの 本会社に てんきんなんです。

アヌ : 本社ですか。それは おめでとう ございます。

でも、どうして どくしんに なるんですか。

中村 : つまと 子供は 東京に のこるんです。

アヌ : えっ、いっしょに 行かないんですか。

中村 : ええ。むすこは 来年 大学の 入学試験が あるから、東京に

のこると 言うし、つまも 今の会社を やめたくない

言うんです。

アヌ : それで、別々に すむんですね。

中村 : ええ、でも、月に、2、3回 週末に 帰る つもりです。

アヌ : 大変ですね。

中村 : でも、いいチャンスですから、りょうりを 習おうと 思って

います。

アヌ : それはいいですね。

月に、2、3回 週末に 帰るのはだれですか。

1. つま
2. なかむらさん
3. アヌさん
4. むすこ

Options :

- 485584133473. 1
- 485584133474. 2
- 485584133475. 3

Question Number : 55 Question Id : 48558433370 Question Type : MCQ Option Shuffling : No Is Question Mandatory : No Calculator : None Response Time : N.A Think Time : N.A Minimum Instruction Time : 0

Correct Marks : 5 Wrong Marks : 1

Question Key Details :

Key	Value
Comprehension	Compl

Read the following passage and answer the questions given below

中村 : 来月からどくしんです。

アヌ : えっ？

中村 : 実は おおさかの 本会社に てんきんなんです。

アヌ : 本社ですか。それは おめでとう ございます。

でも、どうして どくしんに なるんですか。

中村 : つまと 子供は 東京に のこるんです。

アヌ : えっ、いっしょに 行かないんですか。

中村 : ええ。むすこは 来年 大学の 入学試験が あるから、東京に

のこると 言うし、つまも 今の会社を やめたくない

言うんです。

アヌ : それで、別々に すむんですね。

中村 : ええ、でも、月に、2、3回 週末に 帰る つもりです。

アヌ : 大変ですね。

中村 : でも、いいチャンスですから、りょうりを 習おうと 思って

います。

アヌ : それはいいですね。

Please choose the correct kanji of the underlined word.

中村さんはいいチャンスですから、りょうりを 習おうと 思って います。

1. 料理
2. 料理り
3. 綾里
4. 無理

Options :

485584133478. 2
485584133479. 3
485584133480. 4

Sub-Section Number : 2
Sub-Section Id : 4855842419
Question Shuffling Allowed : No
Is Section Default? : null

Question Number : 56 Question Id : 48558433371 Question Type : MCQ Option Shuffling : No Is Question Mandatory : No Calculator : None Response Time : N.A Think Time : N.A Minimum Instruction Time : 0 Correct Marks : 5 Wrong Marks : 1

Question Key Details :

Key	Value
Comprehension	Comp2

Read the following passage and answer the questions given below

さいきんは 6 _____ さむくなりました。 7 _____ ゆきさんは かぜを ひいてしまいました。くすりをのみましたが 8 _____ なおりませんでした。はなみずも でのし、あたまもいたいし、きょうは がっこうを やすみました。びょういんへ 行って いしゃに みて 9 _____。いしゃは 、ねつがあるから、きょうは おふるに

はいらないで、コロナのテストもしもらったほうがいいといいました。いまから、ゆきさんは テストをしにいけます。

Please fill in the blank with the appropriate word .

1. たくさん
2. ひどい
3. だんだん
4. たぶん

Options :

485584133481. 1
485584133482. 2
485584133483. 3
485584133484. 4

Question Number : 57 Question Id : 48558433372 Question Type : MCQ Option Shuffling : No Is Question Mandatory : No Calculator : None Response Time : N.A Think Time : N.A Minimum Instruction Time : 0 Correct Marks : 5 Wrong Marks : 1

Question Key Details :

Key	Value
Comprehension	Comp2

Read the following passage and answer the questions given below

さいきんは 6 _____ さむくなりました。 7 _____ ゆきさんは かぜを ひいてしまいました。くすりをのみましたが 8 _____ なおりませんでした。はなみずも でのし、あたまもいたいし、きょうは がっこうを やすみました。びょういんへ 行って いしゃに みて 9 _____。いしゃは 、ねつがあるから、きょうは おふろに

はいらないで、コロナのテストもしもらったほうがいいといいました。いまから、ゆきさんは テストをしにいきます。

Please fill in the blank with the appropriate word .

1. それは
2. それが
3. それ
4. それで

Options :

- 485584133485. 1
- 485584133486. 2
- 485584133487. 3
- 485584133488. 4

Question Number : 58 Question Id : 48558433373 Question Type : MCQ Option Shuffling : No Is Question Mandatory : No Calculator : None Response Time : N.A Think Time : N.A Minimum Instruction Time : 0

Correct Marks : 5 Wrong Marks : 1

Question Key Details :

Key	Value
Comprehension	Comp2

Read the following passage and answer the questions given below

さいきんは 6 _____ さむくなりました。 7 _____ ゆきさんは かぜを ひいてしまいました。くすりをのみましたが 8 _____ なおりませんでした。はなみずも でのし、あたまもいたいし、きょうは がっこうを やすみました。びょういんへ 行って いしゃに みて 9 _____。いしゃは 、ねつがあるから、きょうは おふろに

はいらないで、コロナのテストもしもらったほうがいいといいました。いまから、ゆきさんは テストをしにいきます。

Please fill in the blank with the appropriate word.

1. だんだん
2. だんだん
3. なかなか
4. たぶん

Options :

- 485584133489. 1
- 485584133490. 2
- 485584133491. 3
- 485584133492. 4

Question Number : 59 Question Id : 48558433374 Question Type : MCQ Option Shuffling : No Is Question Mandatory : No Calculator : None Response Time : N.A Think Time : N.A Minimum Instruction Time : 0

Correct Marks : 5 Wrong Marks : 1

Question Key Details :

Key	Value
Comprehension	Comp2

Read the following passage and answer the questions given below

さいきは 6 _____ さむくなりました。 7 _____ ゆきは かぜを ひいてしまいました。くすりをのみましたが 8 _____ なおりませんでした。はなみずも でのし、あたまもいたいし、きょうは がっこうを やすみました。びょういんへ 行って いしゃに みて 9 _____。いしゃは 、ねつがあるから、きょうは おふろに

はいらないで、コロナのテストもしもらったほうがいいといいました。いまから、ゆきは テストをしにいきます。

Please fill in the blank with the appropriate word.

1. あげました
2. もらいました
3. みて
4. みた

Options :

- 485584133493. 1
- 485584133494. 2
- 485584133495. 3
- 485584133496. 4

Question Number : 60 Question Id : 48558433375 Question Type : MCQ Option Shuffling : No Is Question Mandatory : No Calculator : None Response Time : N.A Think Time : N.A Minimum Instruction Time : 0

Correct Marks : 5 Wrong Marks : 1

Question Key Details :

Key	Value
Comprehension	Comp2

Read the following passage and answer the questions given below

さいきんは 6 _____ さむくなりました。 7 _____ ゆきさんは かぜを ひいてしまいました。くすりをのみましたが 8 _____ なおりませんでした。はなみずも でのし、あたまもいたいし、きょうは がっこうを やすみました。びょういんへ 行って いしゃに みて 9 _____。いしゃは 、ねつがあるから、きょうは おふろに

はいらないで、コロナのテストもしもらったほうがいいといいました。いまから、ゆきさんは テストをしにいきます。

ゆき さんは きょう おふろに _____。

1. はいらないで、コロナテストをしてもらいます。
2. はいってコロナテストをします。
3. はいってねます。
4. はいらなければなりません。

Options :

485584133497. 1

485584133498. 2

485584133499. 3

485584133500. 4

Sub-Section Number :

3

Sub-Section Id :

4855842420

Question Shuffling Allowed :

No

Is Section Default? :

null

Question Number : 61 Question Id : 48558433376 Question Type : MCQ Option Shuffling : No Is Question Mandatory : No Calculator : None Response Time : N.A Think Time : N.A Minimum Instruction Time : 0

Correct Marks : 5 Wrong Marks : 1

Question Key Details :

Key	Value
Comprehension	Comp3

Please read the passage and answer the questions given below

わたしはインドの小さい村でうまれました。結婚するまえに、デリーへ来て、デリー大学でつまにあいました。そつぎょうしてからけっこんしました。けっこんしてからもう10年になりました。いま英語の教師として働いています。田舎にいたときは、いい学校もないし、モールもないし、田舎の生活はたいへんだと思いました。でも、最近疲れたときやさびしいとき、よく田舎の青い空やみどりのやまや母のおいしい料理を思い出しています。目を閉じると、ともだちとおよいだ川のおとが聞こえます。わたしは来年のなつ、しごとをやめて、田舎へ帰るつもりです。そしていなかの子どもたちのために学校を作ろうと思っています。

ディーパク

ディーパクさんはどこでしごとをしていますか。

1. 田舎の学校で
2. 都会の学校で
3. 田舎の会社で
4. 都会の会社で

Options :

- 485584133501. 1
- 485584133502. 2
- 485584133503. 3
- 485584133504. 4

Question Number : 62 Question Id : 48558433377 Question Type : MCQ Option Shuffling : No Is Question Mandatory : No Calculator : None Response Time : N.A Think Time : N.A Minimum Instruction Time : 0

Correct Marks : 5 Wrong Marks : 1

Question Key Details :

Key	Value
Comprehension	Comp3

Please read the passage and answer the questions given below

わたしはインドの小さい村でうまれました。結婚するまえに、デリーへ来て、デリー大学でつまにあいました。そつぎょうしてからけっこんしました。けっこんしてからもう10年になりました。いま英語の教師として働いています。田舎にいたときは、いい学校もないし、モールもないし、田舎の生活はたいへんだと思いました。でも、最近疲れたときやさびしいとき、よく田舎の青い空やみどりのやまや母のおいしい料理を思い出しています。目を閉じると、ともだちとおよいだ川のおとが聞こえます。わたしは来年のなつ、しごとをやめて、田舎へ帰るつもりです。そしていなかの子供たちのために学校を作ろうと思っています。

ディーパク

ディーパクさんは田舎の生活が ()

1. すきでした。
2. すきじゃありませんでした。
3. いいとおもいました。
4. おもしろいとおもいました。

Options :

- 485584133505. 1
- 485584133506. 2
- 485584133507. 3
- 485584133508. 4

Question Number : 63 Question Id : 48558433378 Question Type : MCQ Option Shuffling : No Is Question Mandatory : No Calculator : None Response Time : N.A Think Time : N.A Minimum Instruction Time : 0

Correct Marks : 5 Wrong Marks : 1

Question Key Details :

Key	Value
Comprehension	Comp3

Please read the passage and answer the questions given below

わたしはインドの小さい村でうまれました。結婚するまえに、デリーへ来て、デリー大学でつまにあいました。そつぎょうしてからけっこんしました。けっこんしてからもう10年になりました。いま英語の教師として働いています。田舎にいたときは、いい学校もないし、モールもないし、田舎の生活はたいへんだと思いました。でも、最近疲れたときやさびしいとき、よく田舎の青い空やみどりのやまや母のおいしい料理を思い出しています。目を閉じると、ともだちとおよいだ川のおとが聞こえます。わたしは来年のなつ、しごとをやめて、田舎へ帰るつもりです。そしていなかの子供たちのために学校を作ろうと思っています。

ディーパク

都会では何ができますか。

1. あおいそらやみどりのやまがみられる。
2. かわのおとをきくことができる。
3. ともだちとあそべる。
4. かいものすることができる。

Options :

- 485584133509. 1
- 485584133510. 2
- 485584133511. 3
- 485584133512. 4

Question Number : 64 Question Id : 48558433379 Question Type : MCQ Option Shuffling : No Is Question Mandatory : No Calculator : None Response Time : N.A Think Time : N.A Minimum Instruction Time : 0

Correct Marks : 5 Wrong Marks : 1

Question Key Details :

Key	Value
Comprehension	Comp3

Please read the passage and answer the questions given below

わたしはインドの小さい村でうまれました。結婚するまえに、デリーへ来て、デリー大学でつまにあいました。そつぎょうしてからけっこんしました。けっこんしてからもう10年になりました。いま英語の教師として働いています。田舎にいたときは、いい学校もないし、モールもないし、田舎の生活はたいへんだと思いました。でも、最近疲れたときやさびしいとき、よく田舎の青い空やみどりのやまや母のおいしい料理を思い出しています。目を閉じると、ともだちとおよいだ川のおとが聞こえます。わたしは来年のなつ、しごとをやめて、田舎へ帰るつもりです。そしていなかの子供たちのために学校を作ろうと思っています。

ディーパク

ディーパクさんはいついなかへかえりますか。

1. らいねんのなつ、しごとをやめてかえります。
2. しけんがおわったあと、かえります。
3. ことししごとをやめてかえります。
4. いまきめていません。

Options :

- 485584133513. 1
- 485584133514. 2
- 485584133515. 3
- 485584133516. 4

Question Number : 65 Question Id : 48558433380 Question Type : MCQ Option Shuffling : No Is Question Mandatory : No Calculator : None Response Time : N.A Think Time : N.A Minimum Instruction Time : 0

Correct Marks : 5 Wrong Marks : 1

Question Key Details :

Key	Value
Comprehension	Comp3

Please read the passage and answer the questions given below

わたしはインドの小さい村でうまれました。結婚するまえに、デリーへ来て、デリー大学でつまにあいました。そつぎょうしてからけっこんしました。けっこんしてからもう10年になりました。いま英語の教師として働いています。田舎にいたときは、いい学校もないし、モールもないし、田舎の生活はたいへんだと思いました。でも、最近疲れたときやさびしいとき、よく田舎の青い空やみどりのやまや母のおいしい料理を思い出しています。目を閉じると、ともだちとおよいだ川のおとが聞こえます。わたしは来年のなつ、しごとをやめて、田舎へ帰るつもりです。そしていなかの子供たちのために学校を作ろうと思っています。

ディーパク

ディーパクさんはしょうらい何をしたいですか。

1. 田舎でレストランをつくりたいです。
2. 田舎で学校をつくりたいです。
3. 都会でモールをつくりたいです。
4. 都会で学校をつくりたいです。

Options :

- 485584133517. 1
- 485584133518. 2
- 485584133519. 3
- 485584133520. 4

Sub-Section Number :

4

Sub-Section Id :

4855842421

Question Shuffling Allowed :

Yes

Is Section Default? :

null

Question Number : 66 Question Id : 48558433381 Question Type : MCQ Option Shuffling : No Is Question Mandatory : No Calculator : None Response Time : N.A Think Time : N.A Minimum Instruction Time : 0

Correct Marks : 5 Wrong Marks : 1

Question Key Details :

Key	Value
Comprehension	MCQ

Choose the odd word from the words given below

1. せいこうします
2. ごうかくします
3. しっばいします
4. うんどうします

Options :

485584133521. 1
485584133522. 2
485584133523. 3
485584133524. 4

Question Number : 67 Question Id : 48558433382 Question Type : MCQ Option Shuffling : No Is Question Mandatory : No Calculator : None Response Time : N.A Think Time : N.A Minimum Instruction Time : 0

Correct Marks : 5 Wrong Marks : 1

Question Key Details :

Key	Value
Comprehension	MCQ

Choose the odd word from the words given below

1. せいこうします
2. ごうかくします
3. しっばいします
4. うんどうします

Options :

485584133525. 1
485584133526. 2
485584133527. 3
485584133528. 4

Question Number : 68 Question Id : 48558433383 Question Type : MCQ Option Shuffling : No Is Question Mandatory : No Calculator : None Response Time : N.A Think Time : N.A Minimum Instruction Time : 0

Correct Marks : 5 Wrong Marks : 1

Question Key Details :

Key	Value
Comprehension	MCQ

Choose the odd word from the words given below

1. こんなに
2. おんせん
3. あんなに
4. そんなに

Options :

485584133529. 1
485584133530. 2
485584133531. 3
485584133532. 4

Question Number : 69 Question Id : 48558433384 Question Type : MCQ Option Shuffling : No Is Question Mandatory : No Calculator : None Response Time : N.A Think Time : N.A Minimum Instruction Time : 0

Correct Marks : 5 Wrong Marks : 1

Question Key Details :

Key	Value
Comprehension	MCQ

Please select the correct antonyms for the following words

上がります

1. さけます
2. さかります
3. さがります
4. さがます

Options :

485584133533. 1
485584133534. 2
485584133535. 3
485584133536. 4

Question Number : 70 Question Id : 48558433385 Question Type : MCQ Option Shuffling : No Is Question Mandatory : No Calculator : None Response Time : N.A Think Time : N.A Minimum Instruction Time : 0

Correct Marks : 5 Wrong Marks : 1

Question Key Details :

Key	Value
Comprehension	MCQ

Please select the correct antonyms for the following words

つよい

1. かわい

2. よわい

3. きれい

4. しろい

Options :

- 485584133537. 1
- 485584133538. 2
- 485584133539. 3
- 485584133540. 4

Question Number : 71 Question Id : 48558433386 Question Type : MCQ Option Shuffling : No Is Question Mandatory : No Calculator : None Response Time : N.A Think Time : N.A Minimum Instruction Time : 0

Correct Marks : 5 Wrong Marks : 1

Question Key Details :

Key	Value
Comprehension	MCQ

Rearrange the following to make a meaningful sentence

A. ちょっとしらべましょう

B. おかしいですね。

C. おとが

D. エンジンの

1. C, B, D, A

2. B, C, D, A

3. D, C, B, A

4. C, B, A, D

Options :

- 485584133541. 1
- 485584133542. 2
- 485584133543. 3
- 485584133544. 4

Question Number : 72 Question Id : 48558433387 Question Type : MCQ Option Shuffling : No Is Question Mandatory : No Calculator : None Response Time : N.A Think Time : N.A Minimum Instruction Time : 0

Correct Marks : 5 Wrong Marks : 1

Question Key Details :

Key	Value
Comprehension	MCQ

Rearrange the following to make a meaningful sentence

- A. いますから
- B. そのままに
- C. どうぐをまだつかって
- D. 、しておいてください

- 1. C, A, B, D
- 2. B, C, D, A
- 3. D, C, B, A
- 4. C, B, A, D

Options :

- 485584133545. 1
- 485584133546. 2
- 485584133547. 3
- 485584133548. 4

Question Number : 73 Question Id : 48558433388 Question Type : MCQ Option Shuffling : No Is Question Mandatory : No Calculator : None Response Time : N.A Think Time : N.A Minimum Instruction Time : 0

Correct Marks : 5 Wrong Marks : 1

Question Key Details :

Key	Value
Comprehension	MCQ

Rearrange the following to make a meaningful sentence

- A. という
- B. いみです
- C. 「使用中(しょうちゅう)」は
- D. いまつかっている

- 1. A, D, C, B
- 2. B, D, C, A
- 3. A, D, B, C
- 4. C, D, A, B

Options :

- 485584133549. 1
- 485584133550. 2
- 485584133551. 3

Question Number : 74 Question Id : 48558433389 Question Type : MCQ Option Shuffling : No Is Question Mandatory : No Calculator : None Response Time : N.A Think Time : N.A Minimum Instruction Time : 0

Correct Marks : 5 Wrong Marks : 1

Question Key Details :

Key	Value
Comprehension	MCQ

Rearrange the following to make a meaningful sentence

- A. にほんごを
- B. から
- C. ぺんきょうしています
- D. にほんへいきたいです

- 1. A, B, C, D
- 2. C, A, D, B
- 3. D, B, A, C
- 4. C, B, D, A

Options :

- 485584133553. 1
- 485584133554. 2
- 485584133555. 3
- 485584133556. 4

Question Number : 75 Question Id : 48558433390 Question Type : MCQ Option Shuffling : No Is Question Mandatory : No Calculator : None Response Time : N.A Think Time : N.A Minimum Instruction Time : 0

Correct Marks : 5 Wrong Marks : 1

Question Key Details :

Key	Value
Comprehension	MCQ

Rearrange the following to make a meaningful sentence

- A. りょこうに
- B. いきますか
- C. カメラをもって
- D. あのおおきい

- 1. C, A, B, D
- 2. B, C, D, A
- 3. D, C, B, A
- 4. A, D, C, B

Options :

485584133557. 1
485584133558. 2
485584133559. 3
485584133560. 4

Question Number : 76 Question Id : 48558433391 Question Type : MCQ Option Shuffling : No Is Question Mandatory : No Calculator : None Response Time : N.A Think Time : N.A Minimum Instruction Time : 0

Correct Marks : 5 Wrong Marks : 1

Question Key Details :

Key	Value
Comprehension	MCQ

Rearrange the following to make a meaningful sentence

- A. のんでおきます
- B. きぶんがわるくなりますから
- C. くすりを
- D. バスの中で

- 1. C, A, B, D
- 2. A, C, D, B
- 3. D, B, C, A
- 4. C, B, A, D

Options :

485584133561. 1
485584133562. 2
485584133563. 3
485584133564. 4

Question Number : 77 Question Id : 48558433392 Question Type : MCQ Option Shuffling : No Is Question Mandatory : No Calculator : None Response Time : N.A Think Time : N.A Minimum Instruction Time : 0

Correct Marks : 5 Wrong Marks : 1

Question Key Details :

Key	Value
Comprehension	MCQ

Please fill in the blanks with the correct option

もう7時ですね。かえりませうか。

.....まだしごとをしていますから、（ ）。

1. ああ、よかつた
2. お先に、どうぞ
3. ああ、かえりませう
4. いきませう

Options :

- 485584133565. 1
- 485584133566. 2
- 485584133567. 3
- 485584133568. 4

Question Number : 78 Question Id : 48558433393 Question Type : MCQ Option Shuffling : No Is Question Mandatory : No Calculator : None Response Time : N.A Think Time : N.A Minimum Instruction Time : 0

Correct Marks : 5 Wrong Marks : 1

Question Key Details :

Key	Value
Comprehension	MCQ

Please fill in the blanks with the correct option

これから 日本の ゴミの りょうが _____ そうです。

1. ふえます
2. ふえって
3. ふわない
4. ふえ

Options :

- 485584133569. 1
- 485584133570. 2
- 485584133571. 3
- 485584133572. 4

Question Number : 79 Question Id : 48558433394 Question Type : MCQ Option Shuffling : No Is Question Mandatory : No Calculator : None Response Time : N.A Think Time : N.A Minimum Instruction Time : 0

Correct Marks : 5 Wrong Marks : 1

Question Key Details :

Key	Value
-----	-------

Please fill in the blanks with the correct option

はさみを つかったら _____ に もどして おいてください。。

1. もちに
2. もとに
3. もとのところ
4. もとのところに

Options :

485584133573. 1
485584133574. 2
485584133575. 3
485584133576. 4

Question Number : 80 Question Id : 48558433395 Question Type : MCQ Option Shuffling : No Is Question Mandatory : No Calculator : None Response Time : N.A Think Time : N.A Minimum Instruction Time : 0

Correct Marks : 5 Wrong Marks : 1

Question Key Details :

Key	Value
Comprehension	MCQ

Please fill in the blanks with the correct option

(_____) さいふ(wallet)を おとしてしまいましたよ。

1. どこかに
2. どこかで
3. どこかへ
4. どこかを

Options :

485584133577. 1
485584133578. 2
485584133579. 3
485584133580. 4

Question Number : 81 Question Id : 48558433396 Question Type : MCQ Option Shuffling : No Is Question Mandatory : No Calculator : None Response Time : N.A Think Time : N.A Minimum Instruction Time : 0

Correct Marks : 5 Wrong Marks : 1

Question Key Details :

Key	Value
Comprehension	MCQ

Please read list I and II carefully and choose the correct combinations from the options given

LIST I		LIST II	
A.	あぶない	I.	営業中 <small>えいぎょうちゆう</small>
B.	きょうは やすみ です。	II.	出口 <small>でぐち</small>
C.	今 店が あいています。	III.	本日定休日 <small>ほんじつていぎゅうび</small>
D.	出る ところ。	IV.	危険 <small>きけん</small>

1. A-2, B-1, C-4, D-3
2. A-2, B-3, C-4, D-1
3. A-3, B-2, C-1, D-4
4. A-4, B-3, C-1, D-2

Options :

485584133581. 1
 485584133582. 2
 485584133583. 3
 485584133584. 4

Question Number : 82 Question Id : 48558433397 Question Type : MCQ Option Shuffling : No Is Question Mandatory : No Calculator : None Response Time : N.A Think Time : N.A Minimum Instruction Time : 0

Correct Marks : 5 Wrong Marks : 1

Question Key Details :

Key	Value
Comprehension	MCQ

Please read list I and II carefully and choose the correct combinations from the options given

LIST I		LIST II	
A.	でんきが	I.	こわれています。
B.	みせが	II.	よごれています。
C.	いすが	III.	あいています。
D.	ドレスが	IV.	ついています。

1. A - II, B - IV, C - III, D - I
2. A - III, B - IV, C - I, D - II
3. A - IV, B - III, C - I, D - II
4. A - II, B - IV, C - I, D - III

Options :

485584133585. 1
 485584133586. 2
 485584133587. 3
 485584133588. 4

Question Number : 83 Question Id : 48558433398 Question Type : MCQ Option Shuffling : No Is Question Mandatory : No Calculator : None Response Time : N.A Think Time : N.A Minimum Instruction Time : 0

Correct Marks : 5 Wrong Marks : 1

Question Key Details :

Key	Value
Comprehension	MCQ

Please read list I and II carefully and choose the correct combinations from the options given

LIST I		LIST II	
A.	びょういん	I.	けいさつかん
B.	だいどころ	II.	きょうし
C.	こうばん	III.	おいしやさん
D.	がっこう	IV.	おかあさん

1. A - II, B - IV, C - III, D - I
2. A - III, B - IV, C - I, D - II
3. A - IV, B - III, C - I, D - II
4. A - II, B - IV, C - I, D - III

Options :

- 485584133589. 1
- 485584133590. 2
- 485584133591. 3
- 485584133592. 4

Question Number : 84 Question Id : 48558433399 Question Type : MCQ Option Shuffling : No Is Question Mandatory : No Calculator : None Response Time : N.A Think Time : N.A Minimum Instruction Time : 0

Correct Marks : 5 Wrong Marks : 1

Question Key Details :

Key	Value
Comprehension	MCQ

Please read list I and II carefully and choose the correct combinations from the options given

LIST I		LIST II	
A.	まどが	I.	やぶれています
B.	かみが	II.	とまっています。
C.	いすが	III.	しまっています。
D.	くるまが	IV.	ならんでいます。

1. A - II, B - IV, C - III, D - I

2. A - III, B - I, C - IV, D - II

3. A - IV, B - III, C - I, D - II

4. A - II, B - IV, C - I, D - III

Options :

485584133593. 1
 485584133594. 2
 485584133595. 3
 485584133596. 4

Question Number : 85 Question Id : 48558433400 Question Type : MCQ Option Shuffling : No Is Question Mandatory : No Calculator : None Response Time : N.A Think Time : N.A Minimum Instruction Time : 0 Correct Marks : 5 Wrong Marks : 1

Question Key Details :

Key	Value
Comprehension	MCQ

Please read list I and II carefully and choose the correct combinations from the options given

LIST I		LIST II	
A.	しょうきんしは	I.	はいるなといういみです。
B.	たちいりきんしは	II.	くるまをとめるなといういみです。
C.	ちゅうしゃきんしは	III.	タバコをすうなといういみです。
D.	きんえんは	IV.	つかうなといういみです。

1. A - II, B - IV, C - III, D - I

2. A - IV, B - I, C - II, D - III

3. A - I, B - III, C - II, D - IV

4. A - II, B - IV, C - I, D - III

Options :

485584133597. 1
 485584133598. 2
 485584133599. 3

Question Number : 86 Question Id : 48558433401 Question Type : MCQ Option Shuffling : No Is Question Mandatory : No Calculator : None Response Time : N.A Think Time : N.A Minimum Instruction Time : 0

Correct Marks : 5 Wrong Marks : 1

Question Key Details :

Key	Value
Comprehension	MCQ

Please choose the correct particle to complete the sentence

このさら（　　）よごれていますから、ほかのがありませんか。

1. を
2. に
3. は
4. で

Options :

485584133601. 1
485584133602. 2
485584133603. 3
485584133604. 4

Question Number : 87 Question Id : 48558433402 Question Type : MCQ Option Shuffling : No Is Question Mandatory : No Calculator : None Response Time : N.A Think Time : N.A Minimum Instruction Time : 0

Correct Marks : 5 Wrong Marks : 1

Question Key Details :

Key	Value
Comprehension	MCQ

Please choose the correct particle to complete the sentence

毎晩^{まいばん} 6時^じにかえります ----、きょうおそくなるかもしれません。

1. か
2. が
3. で
4. に

Options :

485584133605. 1
485584133606. 2
485584133607. 3
485584133608. 4

Question Number : 88 Question Id : 48558433403 Question Type : MCQ Option Shuffling : No Is Question Mandatory : No Calculator : None Response Time : N.A Think Time : N.A Minimum Instruction Time : 0

Correct Marks : 5 Wrong Marks : 1

Question Key Details :

Key	Value
Comprehension	MCQ

Please choose the correct particle to complete the sentence

ことし 今年どうしてもJLPTのしけん () ごとくしたいとおもいます。

1. を
2. で
3. が
4. に

Options :

- 485584133609. 1
- 485584133610. 2
- 485584133611. 3
- 485584133612. 4

Question Number : 89 Question Id : 48558433404 Question Type : MCQ Option Shuffling : No Is Question Mandatory : No Calculator : None Response Time : N.A Think Time : N.A Minimum Instruction Time : 0

Correct Marks : 5 Wrong Marks : 1

Question Key Details :

Key	Value
Comprehension	MCQ

Please choose the correct particle to complete the sentence

日本のアニメは こどもたち () にんきがありますね。

1. と
2. を
3. の
4. に

Options :

- 485584133613. 1
- 485584133614. 2
- 485584133615. 3
- 485584133616. 4

Question Number : 90 Question Id : 48558433405 Question Type : MCQ Option Shuffling : No Is Question Mandatory : No Calculator : None Response Time : N.A Think Time : N.A Minimum Instruction Time : 0

Correct Marks : 5 Wrong Marks : 1

Question Key Details :

Key	Value
Comprehension	MCQ

Please read list I and II carefully and choose the correct combinations from the options given.

道 () あそぶな。

1. を
2. で
3. は
4. に

Options :

- 485584133617. 1
- 485584133618. 2
- 485584133619. 3
- 485584133620. 4

Question Number : 91 Question Id : 48558433406 Question Type : MCQ Option Shuffling : No Is Question Mandatory : No Calculator : None Response Time : N.A Think Time : N.A Minimum Instruction Time : 0

Correct Marks : 5 Wrong Marks : 1

Question Key Details :

Key	Value
Comprehension	MCQ

Please choose the correct option for the underlined Kanji/Hiragana.

みんな りょこうの しゃしんを インスタに ポストしてください。

1. 写真
2. 捨身
3. 車新
4. 瀉心

Options :

- 485584133621. 1
- 485584133622. 2
- 485584133623. 3
- 485584133624. 4

Question Number : 92 Question Id : 48558433407 Question Type : MCQ Option Shuffling : No Is Question Mandatory : No Calculator : None Response Time : N.A Think Time : N.A Minimum Instruction Time : 0

Correct Marks : 5 Wrong Marks : 1

Question Key Details :

Key	Value
-----	-------

Please choose the correct option for the underlined Kanji/Hiragana.

「Wrist」ははにほんごでてくびといます。

1. 手首
2. 目道
3. 足首
4. 耳道

Options :

485584133625. 1
485584133626. 2
485584133627. 3
485584133628. 4

Question Number : 93 Question Id : 48558433408 Question Type : MCQ Option Shuffling : No Is Question Mandatory : No Calculator : None Response Time : N.A Think Time : N.A Minimum Instruction Time : 0

Correct Marks : 5 Wrong Marks : 1

Question Key Details :

Key	Value
Comprehension	MCQ

Please choose the correct option for the underlined Kanji/Hiragana.

キムさんは 音楽が上手です。

1. 発楽
2. 楽音
3. 音楽
4. 発生

Options :

485584133629. 1
485584133630. 2
485584133631. 3
485584133632. 4

Question Number : 94 Question Id : 48558433409 Question Type : MCQ Option Shuffling : No Is Question Mandatory : No Calculator : None Response Time : N.A Think Time : N.A Minimum Instruction Time : 0

Correct Marks : 5 Wrong Marks : 1

Question Key Details :

Key	Value
Comprehension	MCQ

おおゆきでみちがあるきにくく (difficult to walk) になりました。

1. 小雨
2. 大雨
3. 小雪
4. 大雪

Options :

485584133633. 1
485584133634. 2
485584133635. 3
485584133636. 4

Question Number : 95 Question Id : 48558433410 Question Type : MCQ Option Shuffling : No Is Question Mandatory : No Calculator : None Response Time : N.A Think Time : N.A Minimum Instruction Time : 0

Correct Marks : 5 Wrong Marks : 1

Question Key Details :

Key	Value
Comprehension	MCQ

Please choose the correct option for the underlined Kanji/Hiragana.

わたしのうちはぎんこうのちかくにあります。

1. 銀行
2. 金好
3. 銀高
4. 食行

Options :

485584133637. 1
485584133638. 2
485584133639. 3
485584133640. 4

Question Number : 96 Question Id : 48558433411 Question Type : MCQ Option Shuffling : No Is Question Mandatory : No Calculator : None Response Time : N.A Think Time : N.A Minimum Instruction Time : 0

Correct Marks : 5 Wrong Marks : 1

Question Key Details :

Key	Value
Comprehension	MCQ

Please choose the correct option for the underlined Kanji/Hiragana.

ここに 名前を かかなくてもいいです。

1. なまえ
2. なまい
3. たまえ
4. たまい

Options :

- 485584133641. 1
- 485584133642. 2
- 485584133643. 3
- 485584133644. 4

Question Number : 97 Question Id : 48558433412 Question Type : MCQ Option Shuffling : No Is Question Mandatory : No Calculator : None Response Time : N.A Think Time : N.A Minimum Instruction Time : 0

Correct Marks : 5 Wrong Marks : 1

Question Key Details :

Key	Value
Comprehension	MCQ

Please choose the correct option for the underlined Kanji/Hiragana.

バスは ふべんですが、メトロは とても べんりですね。

1. 不便
2. 便府
3. 便利
4. 不鞭

Options :

- 485584133645. 1
- 485584133646. 2
- 485584133647. 3
- 485584133648. 4

Question Number : 98 Question Id : 48558433413 Question Type : MCQ Option Shuffling : No Is Question Mandatory : No Calculator : None Response Time : N.A Think Time : N.A Minimum Instruction Time : 0

Correct Marks : 5 Wrong Marks : 1

Question Key Details :

Key	Value
Comprehension	MCQ

Please choose the correct option for the underlined Kanji/Hiragana.

がっこうをそつぎょうしたら、どんなしごとをしたいですか。

1. 市事

2. 四事

3. 仕事

4. 士事

Options :

485584133649. 1

485584133650. 2

485584133651. 3

485584133652. 4

Question Number : 99 Question Id : 48558433414 Question Type : MCQ Option Shuffling : No Is Question Mandatory : No Calculator : None Response Time : N.A Think Time : N.A Minimum Instruction Time : 0

Correct Marks : 5 Wrong Marks : 1

Question Key Details :

Key	Value
Comprehension	MCQ

Please choose the correct option for the underlined Kanji/Hiragana.

きょう ごごから てんきがわるくなりました。

1. 五語

2. 午前

3. 午後

4. 午後

Options :

485584133653. 1

485584133654. 2

485584133655. 3

485584133656. 4

Question Number : 100 Question Id : 48558433415 Question Type : MCQ Option Shuffling : No Is Question Mandatory : No Calculator : None Response Time : N.A Think Time : N.A Minimum Instruction Time : 0

Correct Marks : 5 Wrong Marks : 1

Question Key Details :

Key	Value
Comprehension	MCQ

Please choose the correct option for the underlined Kanji/Hiragana.

きのう たべた にほんりょうりについて ともだちと 話しました。

1. 食べた
2. 飲べた
3. 食た
4. 食べた

Options :

- 485584133657. 1
- 485584133658. 2
- 485584133659. 3
- 485584133660. 4

Entrepreneurship

Group Number :	6
Group Id :	485584744
Group Maximum Duration :	45
Group Minimum Duration :	45
Show Attended Group? :	No
Edit Attended Group? :	No
Break time :	0
Group Marks :	200
Is this Group for Examiner? :	No
Examiner permission :	Cant View
Show Progress Bar? :	No

Entrepreneurship

Section Id :	485584858
Section Number :	1
Section type :	Online
Mandatory or Optional :	Mandatory
Number of Questions :	50
Number of Questions to be attempted :	40
Section Marks :	200
Enable Mark as Answered Mark for Review and Clear Response :	Yes
Maximum Instruction Time :	0
Sub-Section Number :	1
Sub-Section Id :	4855842422
Question Shuffling Allowed :	Yes
Is Section Default? :	null

Question Number : 101 Question Id : 48558433466 Question Type : MCQ Option Shuffling : No Is Question Mandatory :
No Calculator : None Response Time : N.A Think Time : N.A Minimum Instruction Time : 0
Correct Marks : 5 Wrong Marks : 1

Question Key Details :

Key	Value
Comprehension	MCQ

Creativity process occurs in the following sequence:

- A. Illumination
- B. Preparation
- C. Verification
- D. Idea Germination
- E. Incubation

Choose the correct answer from the options given below:

- 1. B, A, D, C, E
- 2. D, B, E, A, C
- 3. B, D, A, E, C
- 4. A, C, D, B, E

Options :

- 485584133861. 1
- 485584133862. 2
- 485584133863. 3
- 485584133864. 4

Question Number : 102 Question Id : 48558433467 Question Type : MCQ Option Shuffling : No Is Question Mandatory : No Calculator : None Response Time : N.A Think Time : N.A Minimum Instruction Time : 0

Correct Marks : 5 Wrong Marks : 1

Question Key Details :

Key	Value
Comprehension	MCQ

All ideas may not become a sound business opportunity. Therefore we need to assess the idea and opportunity by following a correct sequence. Rearrange the steps in the correct order.

- A. Level of operation
- B. Product identification
- C. Cost of production
- D. Competition
- E. Application and use

Choose the correct answer from the options given below:

- 1. B, A, D, C, E
- 2. B, E, A, C, D
- 3. C, A, B, E, D
- 4. B, E, A, D, C

Options :

- 485584133865. 1

485584133866. 2
485584133867. 3
485584133868. 4

Question Number : 103 Question Id : 48558433468 Question Type : MCQ Option Shuffling : No Is Question Mandatory : No Calculator : None Response Time : N.A Think Time : N.A Minimum Instruction Time : 0

Correct Marks : 5 Wrong Marks : 1

Question Key Details :

Key	Value
Comprehension	MCQ

_____ are 'Convenient frames of reference for streamlining the process of generation of ideas'.

1. Reference fields
2. Idea generation
3. Idea fields
4. Product generation

Options :

485584133869. 1
485584133870. 2
485584133871. 3
485584133872. 4

Question Number : 104 Question Id : 48558433469 Question Type : MCQ Option Shuffling : No Is Question Mandatory : No Calculator : None Response Time : N.A Think Time : N.A Minimum Instruction Time : 0

Correct Marks : 5 Wrong Marks : 1

Question Key Details :

Key	Value
Comprehension	MCQ

While on a family outing to a nearby mall by the name of 'RB Mall', Mr. Harji saw that most people coming to the mall forgot their mask, and had to pay a fine ranging from ₹500 to ₹2000/-. So he decided to open a shop for selling mask at the mall entrance. Identify the trend:

1. Read Trend
2. See Trend
3. Watch Trend
4. Talk Trend

Options :

485584133873. 1
485584133874. 2
485584133875. 3
485584133876. 4

Question Number : 105 Question Id : 48558433470 Question Type : MCQ Option Shuffling : No Is Question Mandatory : No Calculator : None Response Time : N.A Think Time : N.A Minimum Instruction Time : 0

Correct Marks : 5 Wrong Marks : 1

Question Key Details :

Key	Value
Comprehension	MCQ

'Mansukhbhai Prajapati thought of a non-stick pan made from clay and a clay refrigerator that works without electricity.' Which step of creative process is discussed above?

1. Preparation
2. Idea germination
3. Incubation
4. Illumination

Options :

- 485584133877. 1
- 485584133878. 2
- 485584133879. 3
- 485584133880. 4

Question Number : 106 Question Id : 48558433471 Question Type : MCQ Option Shuffling : No Is Question Mandatory : No Calculator : None Response Time : N.A Think Time : N.A Minimum Instruction Time : 0

Correct Marks : 5 Wrong Marks : 1

Question Key Details :

Key	Value
Comprehension	MCQ

In which type of opportunity assessment step, you examine an idea through finding out whether the product is present in use and you may think of modifying it for the better use?

1. Level of operation
2. Cost
3. Application and use
4. Competition

Options :

- 485584133881. 1
- 485584133882. 2
- 485584133883. 3
- 485584133884. 4

Question Number : 107 Question Id : 48558433472 Question Type : MCQ Option Shuffling : No Is Question Mandatory : No Calculator : None Response Time : N.A Think Time : N.A Minimum Instruction Time : 0

Correct Marks : 5 Wrong Marks : 1

Question Key Details :

Key	Value
Comprehension	MCQ

Family dinner, Speciality Tourism, Career Counselling Centres and Ice-cream Parlours are a part of which idea field?

1. Creative Efforts
2. Trading related Ideas
3. Service Sector Ideas
4. Market Driven Ideas

Options :

- 485584133885. 1
- 485584133886. 2
- 485584133887. 3
- 485584133888. 4

Question Number : 108 Question Id : 48558433473 Question Type : MCQ Option Shuffling : No Is Question Mandatory : No Calculator : None Response Time : N.A Think Time : N.A Minimum Instruction Time : 0

Correct Marks : 5 Wrong Marks : 1

Question Key Details :

Key	Value
Comprehension	MCQ

Avantika did a course in food preservation and decided to set up her own business of food preservation, canning, freezing and pickling. Identify the type of natural resource used by her:

1. Flowers
2. Medicinal Herbs
3. Citrus and other fruits
4. Horticulture

Options :

- 485584133889. 1
- 485584133890. 2
- 485584133891. 3
- 485584133892. 4

Question Number : 109 Question Id : 48558433474 Question Type : MCQ Option Shuffling : No Is Question Mandatory : No Calculator : None Response Time : N.A Think Time : N.A Minimum Instruction Time : 0

Correct Marks : 5 Wrong Marks : 1

Question Key Details :

Key	Value
Comprehension	MCQ

Identify the term related with concept of "gain generated on an investment relative to the amount of money invested by the shareholder".

1. Returns on Investment
2. Capital Gain
3. Return on Equity
4. Economic Order Quantity

Options :

- 485584133893. 1
- 485584133894. 2
- 485584133895. 3
- 485584133896. 4

Question Number : 110 Question Id : 48558433475 Question Type : MCQ Option Shuffling : No Is Question Mandatory : No Calculator : None Response Time : N.A Think Time : N.A Minimum Instruction Time : 0

Correct Marks : 5 Wrong Marks : 1

Question Key Details :

Key	Value
Comprehension	MCQ

Shreya has prepared her business plan and is stuck at the marketing plan for her enterprise. Suggest correct steps to her for marketing plan.

- A. Business Situation Analysis
- B. Define marketing Strategy
- C. Conduct SWOT Analysis
- D. Identify the target Market
- E. Establish goals

Choose the correct answer from the options given below:

1. A—B—C—D—E
2. A—D—C—E—B
3. A—C—D—E—B
4. A—D—C—B—E

Options :

- 485584133897. 1
- 485584133898. 2
- 485584133899. 3
- 485584133900. 4

Question Number : 111 Question Id : 48558433476 Question Type : MCQ Option Shuffling : No Is Question Mandatory : No Calculator : None Response Time : N.A Think Time : N.A Minimum Instruction Time : 0

Correct Marks : 5 Wrong Marks : 1

Question Key Details :

Key	Value
Comprehension	MCQ

"Thinking in advance, what is to be done, when it is to be done, how to be done and by whom it should be done," defines

1. Problem Solving
2. Decision Making
3. Planning
4. Spotting opportunity

Options :

- 485584133901. 1
- 485584133902. 2
- 485584133903. 3
- 485584133904. 4

Question Number : 112 Question Id : 48558433477 Question Type : MCQ Option Shuffling : No Is Question Mandatory : No Calculator : None Response Time : N.A Think Time : N.A Minimum Instruction Time : 0

Correct Marks : 5 Wrong Marks : 1

Question Key Details :

Key	Value
Comprehension	MCQ

'How do we get there' question in marketing plan doesn't discuss:

1. The specific marketing strategy that will be implemented
2. When it will occur ?
3. Who will be responsible for the monitoring of activities ?
4. What need it satisfies ?

Options :

- 485584133905. 1
- 485584133906. 2
- 485584133907. 3
- 485584133908. 4

Question Number : 113 Question Id : 48558433478 Question Type : MCQ Option Shuffling : No Is Question Mandatory : No Calculator : None Response Time : N.A Think Time : N.A Minimum Instruction Time : 0

Correct Marks : 5 Wrong Marks : 1

Question Key Details :

Key	Value
Comprehension	MCQ

Raghav is the owner of a business. He wants to transfer his ownership to his daughter Poorvi. He can do this without taking permission from anyone if the business is a _____ (Fill in the blank.)

1. Partnership firm
2. Public limited company
3. Private limited company
4. Sole Proprietorship

Options :

- 485584133909. 1
- 485584133910. 2
- 485584133911. 3
- 485584133912. 4

Question Number : 114 Question Id : 48558433479 Question Type : MCQ Option Shuffling : No Is Question Mandatory : No Calculator : None Response Time : N.A Think Time : N.A Minimum Instruction Time : 0

Correct Marks : 5 Wrong Marks : 1

Question Key Details :

Key	Value
Comprehension	MCQ

_____ element of business plan helps the entrepreneur to carefully evaluate and decide the legal structure of the organisation. Fill in the above blank with correct option:

1. Organisational plan
2. Marketing plan
3. Financial plan
4. Production plan

Options :

- 485584133913. 1
- 485584133914. 2
- 485584133915. 3
- 485584133916. 4

Question Number : 115 Question Id : 48558433480 Question Type : MCQ Option Shuffling : No Is Question Mandatory : No Calculator : None Response Time : N.A Think Time : N.A Minimum Instruction Time : 0

Correct Marks : 5 Wrong Marks : 1

Question Key Details :

Key	Value
Comprehension	MCQ

Mannat, a student of entrepreneurship decided to start her venture of manufacturing "Flood rescuing raft". For funding, she contacted one of the angel investors who suggested her to prepare a three minute summary of her business plan. Identify from the following options, the format of business plan suggested to Mannat, which is often used as a teaser to awaken the interest of potential funders, customers etc.

1. A well written presentation for external shareholders
2. An internal operational plan
3. A pitch deck with oral narratives
4. Elevator pitch

Options :

485584133917. 1
485584133918. 2
485584133919. 3
485584133920. 4

Question Number : 116 Question Id : 48558433481 Question Type : MCQ Option Shuffling : No Is Question Mandatory : No Calculator : None Response Time : N.A Think Time : N.A Minimum Instruction Time : 0

Correct Marks : 5 Wrong Marks : 1

Question Key Details :

Key	Value
Comprehension	MCQ

Select the option that enlists all the micro environment factors from the following

- A. Competition
- B. Rate of Inflation
- C. Suppliers
- D. Customers
- E. Size of young population of India.

Choose the correct answer from the options given below:

1. B, D, E only
2. A, C, D only
3. C, D, E only
4. B, C, D only

Options :

485584133921. 1
485584133922. 2
485584133923. 3
485584133924. 4

Question Number : 117 Question Id : 48558433482 Question Type : MCQ Option Shuffling : No Is Question Mandatory : No Calculator : None Response Time : N.A Think Time : N.A Minimum Instruction Time : 0

Correct Marks : 5 Wrong Marks : 1

Question Key Details :

Key	Value
Comprehension	MCQ

Match List I with List II

LIST I Components of financial plan		LIST II Features	
A.	Proforma investment decision	I.	The amount of cash available
B.	Proforma Financing decision	II.	How much funds are required
C.	Proforma cash flow	III.	Protected net profit
D.	Proforma Income Statement	IV.	Where will funds come from

Choose the correct answer from the options given below:

1. A-I, B-II, C-III, D-IV
2. A-II, B-IV, C-I, D-III
3. A-IV, B-III, C-II, D-I
4. A-III, B-II, C-I, D-IV

Options :

485584133925. 1
485584133926. 2
485584133927. 3
485584133928. 4

Question Number : 118 Question Id : 48558433483 Question Type : MCQ Option Shuffling : No Is Question Mandatory : No Calculator : None Response Time : N.A Think Time : N.A Minimum Instruction Time : 0

Correct Marks : 5 Wrong Marks : 1

Question Key Details :

Key	Value
Comprehension	MCQ

A good advertising catches the eye or ear of the audience. The correct order of remaining stages is:

- A. Interest
- B. Action
- C. Attention
- D. Desire

Choose the correct answer from the options given below:

1. A, B, C only
2. A, D, B only
3. B, D only
4. D, A, B only

Options :

485584133929. 1
485584133930. 2
485584133931. 3

Question Number : 119 Question Id : 48558433484 Question Type : MCQ Option Shuffling : No Is Question Mandatory : No Calculator : None Response Time : N.A Think Time : N.A Minimum Instruction Time : 0

Correct Marks : 5 Wrong Marks : 1

Question Key Details :

Key	Value
Comprehension	MCQ

' A Patent' :

1. Gives the creator of original work exclusive rights
2. Grants an inventor the right to exclude others from using or selling an invention
3. A recognizable sign, design or expression
4. Protects the visual design of objects that are not purely utilitarian

Options :

- 485584133933. 1
- 485584133934. 2
- 485584133935. 3
- 485584133936. 4

Question Number : 120 Question Id : 48558433485 Question Type : MCQ Option Shuffling : No Is Question Mandatory : No Calculator : None Response Time : N.A Think Time : N.A Minimum Instruction Time : 0

Correct Marks : 5 Wrong Marks : 1

Question Key Details :

Key	Value
Comprehension	MCQ

Match List I with List II

LIST I		LIST II	
A.	Product	I.	Method to spread the word about the product or service
B.	Price	II.	Item actually being sold
C.	Place	III.	Value put on a product
D.	Promotion	IV.	Path along which goods move from producers to consumers

Choose the correct answer from the options given below:

1. A-IV, B-II, C-I, D-III
2. A-III, B-II, C-IV, D-I
3. A-II, B-I, C-IV, D-III
4. A-II, B-III, C-IV, D-I

Options :

- 485584133937. 1
- 485584133938. 2
- 485584133939. 3

Question Number : 121 Question Id : 48558433486 Question Type : MCQ Option Shuffling : No Is Question Mandatory : No Calculator : None Response Time : N.A Think Time : N.A Minimum Instruction Time : 0

Correct Marks : 5 Wrong Marks : 1

Question Key Details :

Key	Value
Comprehension	MCQ

Identify the correct statements

- A. A logo is used as a short path for advertising.
- B. A logo anchors company's brand.
- C. A logo is only used by individuals.
- D. A logo has to be completely graphic.
- E. A logo is also called logotype.

Choose the correct answer from the options given below:

- 1. A, B only
- 2. A, B, E only
- 3. A, E only
- 4. C, E only

Options :

- 485584133941. 1
- 485584133942. 2
- 485584133943. 3
- 485584133944. 4

Question Number : 122 Question Id : 48558433487 Question Type : MCQ Option Shuffling : No Is Question Mandatory : No Calculator : None Response Time : N.A Think Time : N.A Minimum Instruction Time : 0

Correct Marks : 5 Wrong Marks : 1

Question Key Details :

Key	Value
Comprehension	MCQ

When, with the merger of two companies, the combined value of the entity is more than the sum total of their individual company value, it is called as _____;

- 1. Competency
- 2. Value addition
- 3. Synergy
- 4. Conglomerate

Options :

- 485584133945. 1
- 485584133946. 2
- 485584133947. 3

Question Number : 123 Question Id : 48558433488 Question Type : MCQ Option Shuffling : No Is Question Mandatory : No Calculator : None Response Time : N.A Think Time : N.A Minimum Instruction Time : 0

Correct Marks : 5 Wrong Marks : 1

Question Key Details :

Key	Value
Comprehension	MCQ

"Rohan took an agency of MRF tyres & opened a shop at Lajpat Nagar market".

Which type of franchising is discussed in the above paragraph?

1. Manufacturing franchise opportunity
2. Product franchise business opportunity
3. Business franchise opportunity venture
4. Business format franchise opportunity

Options :

485584133949. 1

485584133950. 2

485584133951. 3

485584133952. 4

Question Number : 124 Question Id : 48558433489 Question Type : MCQ Option Shuffling : No Is Question Mandatory : No Calculator : None Response Time : N.A Think Time : N.A Minimum Instruction Time : 0

Correct Marks : 5 Wrong Marks : 1

Question Key Details :

Key	Value
Comprehension	MCQ

Which of the following is NOT the advantage of franchising from the point of view of franchisee?

1. Product Acceptance
2. Knowledge of the market
3. Quick Expansion
4. Management expertise

Options :

485584133953. 1

485584133954. 2

485584133955. 3

485584133956. 4

Question Number : 125 Question Id : 48558433490 Question Type : MCQ Option Shuffling : No Is Question Mandatory : No Calculator : None Response Time : N.A Think Time : N.A Minimum Instruction Time : 0

Correct Marks : 5 Wrong Marks : 1

Question Key Details :

Key	Value
-----	-------

Comprehension	MCQ
---------------	-----

A merger between the two soft drink manufacturing company in Jaipur is an example of :

1. Conglomerate
2. Market extension mergers
3. Product extension mergers
4. Horizontal merger

Options :

485584133957. 1
485584133958. 2
485584133959. 3
485584133960. 4

Question Number : 126 Question Id : 48558433491 Question Type : MCQ Option Shuffling : No Is Question Mandatory : No Calculator : None Response Time : N.A Think Time : N.A Minimum Instruction Time : 0

Correct Marks : 5 Wrong Marks : 1

Question Key Details :

Key	Value
Comprehension	MCQ

Costs involved with receipt of goods, inspection of goods is known as _____.

1. Purchased cost of inventory
2. Ordering cost
3. Holding cost
4. EOQ (Economic Order Quantity)

Options :

485584133961. 1
485584133962. 2
485584133963. 3
485584133964. 4

Question Number : 127 Question Id : 48558433492 Question Type : MCQ Option Shuffling : No Is Question Mandatory : No Calculator : None Response Time : N.A Think Time : N.A Minimum Instruction Time : 0

Correct Marks : 5 Wrong Marks : 1

Question Key Details :

Key	Value
Comprehension	MCQ

Money needed to fund the normal day to day operations of a business is:

1. Working Capital
2. Shareholders funds
3. Depreciation
4. Interest

Options :

- 485584133965. 1
- 485584133966. 2
- 485584133967. 3
- 485584133968. 4

Question Number : 128 Question Id : 48558433493 Question Type : MCQ Option Shuffling : No Is Question Mandatory : No Calculator : None Response Time : N.A Think Time : N.A Minimum Instruction Time : 0

Correct Marks : 5 Wrong Marks : 1

Question Key Details :

Key	Value
Comprehension	MCQ

Net working capital can be calculated using:

- A. Current assets
- B. Non-current assets
- C. Current Liabilities
- D. Non-current Liabilities
- E. Shareholder's funds

Choose the correct answer from the options given below:

1. A and D only
2. A and B only
3. A and C only
4. D and E only

Options :

- 485584133969. 1
- 485584133970. 2
- 485584133971. 3
- 485584133972. 4

Question Number : 129 Question Id : 48558433494 Question Type : MCQ Option Shuffling : No Is Question Mandatory : No Calculator : None Response Time : N.A Think Time : N.A Minimum Instruction Time : 0

Correct Marks : 5 Wrong Marks : 1

Question Key Details :

Key	Value
Comprehension	MCQ

Calculate ROI (Return on Investment); where you spend ₹2,00,000/- to open a restaurant and make a profit of ₹40,000/- in one year

1. 10%
2. 20%
3. 50%
4. 25%

Options :

485584133973. 1
485584133974. 2
485584133975. 3
485584133976. 4

Question Number : 130 Question Id : 48558433495 Question Type : MCQ Option Shuffling : No Is Question Mandatory : No Calculator : None Response Time : N.A Think Time : N.A Minimum Instruction Time : 0

Correct Marks : 5 Wrong Marks : 1

Question Key Details :

Key	Value
Comprehension	MCQ

Effective Inventory Control System aims at

- A. Providing stock as and when the need arises
- B. Procuring stock at minimum possible price
- C. Minimizing cost
- D. Minimizing investment in inventory
- E. Minimizing Control

Choose the correct answer from the options given below:

1. A and D only
2. B and D only
3. A and B only
4. D and E only

Options :

485584133977. 1
485584133978. 2
485584133979. 3
485584133980. 4

Question Number : 131 Question Id : 48558433496 Question Type : MCQ Option Shuffling : No Is Question Mandatory : No Calculator : None Response Time : N.A Think Time : N.A Minimum Instruction Time : 0

Correct Marks : 5 Wrong Marks : 1

Question Key Details :

Key	Value
Comprehension	MCQ

A seller sells 30000 units of a product per year, demand is uniform. Purchase cost is Rs. 6/- per product. Holding cost per annum is 20% of purchase cost. Ordering cost is Rs.500/- per order. What would be the Economic Order Quantity?

1. 5000 units
2. 5500 units
3. 5200 units
4. 4800 units

Options :

485584133981. 1
485584133982. 2
485584133983. 3
485584133984. 4

Question Number : 132 Question Id : 48558433497 Question Type : MCQ Option Shuffling : No Is Question Mandatory : No Calculator : None Response Time : N.A Think Time : N.A Minimum Instruction Time : 0

Correct Marks : 5 Wrong Marks : 1

Question Key Details :

Key	Value
Comprehension	MCQ

Sandeep, Mohit, Rajat and Rakesh are businessmen producing different products. It takes Sandeep 4 months, Mohit 3 months, Rajat 7 months and Rakesh 1 month, to purchase inventory and to sell the finished product in the market to get cash. Who will require maximum working capital?

1. Sandeep
2. Mohit
3. Rajat
4. Rakesh

Options :

485584133985. 1
485584133986. 2
485584133987. 3
485584133988. 4

Question Number : 133 Question Id : 48558433498 Question Type : MCQ Option Shuffling : No Is Question Mandatory : No Calculator : None Response Time : N.A Think Time : N.A Minimum Instruction Time : 0

Correct Marks : 5 Wrong Marks : 1

Question Key Details :

Key	Value
Comprehension	MCQ

The role of transferring financial resources from the surplus units to deficit units is referred to as :

1. Rights Issue
2. Angel Investors
3. Capital Markets
4. Financial intermediation

Options :

- 485584133989. 1
- 485584133990. 2
- 485584133991. 3
- 485584133992. 4

Question Number : 134 Question Id : 48558433499 Question Type : MCQ Option Shuffling : No Is Question Mandatory : No Calculator : None Response Time : N.A Think Time : N.A Minimum Instruction Time : 0

Correct Marks : 5 Wrong Marks : 1

Question Key Details :

Key	Value
Comprehension	MCQ

The 'new issues' may be issued by old companies and are called _____.

1. Public issue
2. Rights issue
3. Further issue
4. Initial issue

Options :

- 485584133993. 1
- 485584133994. 2
- 485584133995. 3
- 485584133996. 4

Question Number : 135 Question Id : 48558433500 Question Type : MCQ Option Shuffling : No Is Question Mandatory : No Calculator : None Response Time : N.A Think Time : N.A Minimum Instruction Time : 0

Correct Marks : 5 Wrong Marks : 1

Question Key Details :

Key	Value
Comprehension	MCQ

Mahima started a venture where she could provide food from various restaurants to passengers travelling by train. She created an app for the same. She was guided all throughout by her friend & mentor Shalini, who was a successful entrepreneur herself. Shalini had a corpus of funds which she decided to transfer to Mahima for her venture. Mahima preferred to give Shalini a return on her investment. Identify the source of financing for Mahima.

1. Venture Capital
2. Angel Investor
3. Loan
4. Charity

Options :

- 485584133997. 1
- 485584133998. 2
- 485584133999. 3
- 485584134000. 4

Question Number : 136 Question Id : 48558433501 Question Type : MCQ Option Shuffling : No Is Question Mandatory : No Calculator : None Response Time : N.A Think Time : N.A Minimum Instruction Time : 0

Correct Marks : 5 Wrong Marks : 1

Question Key Details :

Key	Value
Comprehension	MCQ

_____ is a type of private equity capital provided as seed funding to early stage, high potential, high risk growth up companies/entrepreneurs.

1. Angel investor
2. Venture Capital
3. Working Capital
4. Fixed Capital

Options :

- 485584134001. 1
- 485584134002. 2
- 485584134003. 3
- 485584134004. 4

Question Number : 137 Question Id : 48558433502 Question Type : MCQ Option Shuffling : No Is Question Mandatory : No Calculator : None Response Time : N.A Think Time : N.A Minimum Instruction Time : 0

Correct Marks : 5 Wrong Marks : 1

Question Key Details :

Key	Value
Comprehension	MCQ

Match List I with List II

LIST I		LIST II	
Types of Issues		Characteristics	
A.	Public issue	I.	Inexpensive & no brokerage
B.	Rights issue	II.	Stock options to motivate employees
C.	Private placement	III.	Issue of prospects
D.	Offer to employees	IV.	UTI, LIC, GICI, SLFC

Choose the correct answer from the options given below:

1. A-IV, B-III, C-II, D-I
2. A-III, B-I, C-IV, D-II
3. A-II, B-IV, C-I, D-III
4. A-I, B-III, C-II, D-IV

Options :

485584134005. 1
485584134006. 2
485584134007. 3
485584134008. 4

Question Number : 138 Question Id : 48558433503 Question Type : MCQ Option Shuffling : No Is Question Mandatory : No Calculator : None Response Time : N.A Think Time : N.A Minimum Instruction Time : 0

Correct Marks : 5 Wrong Marks : 1

Question Key Details :

Key	Value
Comprehension	MCQ

Venture capitalist look for an exit from the business in the time frame of typically 3-7 years. Identify the way venture capitalist (VC) exit within the time frame from the business where they are investing?

1. VC's have a continuous involvement in the business so they do not exit.
2. VC's disinvest the holdings either to the promoters or in the market
3. VC's invest in the early stage and exit in the pre-public stage by disinvesting their holdings to the promoters
4. VC's exit after selling the shares in the market

Options :

485584134009. 1
485584134010. 2
485584134011. 3
485584134012. 4

Question Number : 139 Question Id : 48558433504 Question Type : MCQ Option Shuffling : No Is Question Mandatory : No Calculator : None Response Time : N.A Think Time : N.A Minimum Instruction Time : 0

Correct Marks : 5 Wrong Marks : 1

Question Key Details :

Key	Value
Comprehension	MCQ

Identify the role played by Amit in the process of Financial Intermediation, if he has money which he does not want to spend

1. Financial Intermediary
2. Surplus Unit
3. Deficit Unit
4. Lender

Options :

485584134013. 1
485584134014. 2
485584134015. 3
485584134016. 4

Question Number : 140 Question Id : 48558433505 Question Type : MCQ Option Shuffling : No Is Question Mandatory : No Calculator : None Response Time : N.A Think Time : N.A Minimum Instruction Time : 0

Correct Marks : 5 Wrong Marks : 1

Question Key Details :

Key	Value
Comprehension	MCQ

Market facilitating to transfer resources from the savers to the entrepreneurs setting new enterprises is:

1. Primary market
2. Secondary market
3. Money Market
4. Debt Market

Options :

485584134017. 1
485584134018. 2
485584134019. 3
485584134020. 4

Sub-Section Number : 2
Sub-Section Id : 4855842423
Question Shuffling Allowed : No
Is Section Default? : null

Question Number : 141 Question Id : 48558433506 Question Type : MCQ Option Shuffling : No Is Question Mandatory : No Calculator : None Response Time : N.A Think Time : N.A Minimum Instruction Time : 0

Correct Marks : 5 Wrong Marks : 1

Question Key Details :

Key	Value
Comprehension	Compl

Case Study (41-45):

Vibha had created a unique all weather jackets which had solar panels embedded in it. The USP of the jacket was that, harnessing the solar energy it could keep the jacket warm like a heater and cold like an air conditioner depending on the weather. Her market was the youth who came out of the comfort of their homes to stay in hostels. The name of her product was 'TURN COAT' which was beautifully written in comic sans font outside her showroom in FLD Mall. The name had a rising sun next to it making it an attractive composition to look at. Vibha was reading a lot of literature on the promotion strategies that she could use. She had already fixed a public appearance by the superstar Ralia Kapoor at her showroom in 15 days. She opened up Instagram and Twitter accounts in the name of 'TURN COAT'. She got the name of the product and the symbol of the rising sun printed on the parking ticket, that were collected by customers coming to the mall. While deciding on the pricing she was suggested by her mentor to keep the price very high to recover her R & D costs spent on developing the product. She was a little hesitant to do so and decided to price TURN COAT by covering the cost of producing it plus with reasonable profits

The name of Vibha's product 'TURN COAT' written in Comic sans font and the rising sun next to the name is:

1. Brand Mark
2. Logo
3. Brand Name
4. Trade Mark

Options :

- 485584134021. 1
- 485584134022. 2
- 485584134023. 3
- 485584134024. 4

Question Number : 142 Question Id : 48558433507 Question Type : MCQ Option Shuffling : No Is Question Mandatory : No Calculator : None Response Time : N.A Think Time : N.A Minimum Instruction Time : 0

Correct Marks : 5 Wrong Marks : 1

Question Key Details :

Key	Value
Comprehension	Comp1

Case Study (41-45):

Vibha had created a unique all weather jackets which had solar panels embedded in it. The USP of the jacket was that, harnessing the solar energy it could keep the jacket warm like a heater and cold like an air conditioner depending on the weather. Her market was the youth who came out of the comfort of their homes to stay in hostels. The name of her product was 'TURN COAT' which was beautifully written in comic sans font outside her showroom in FLD Mall. The name had a rising sun next to it making it an attractive composition to look at. Vibha was reading a lot of literature on the promotion strategies that she could use. She had already fixed a public appearance by the superstar Ralia Kapoor at her showroom in 15 days. She opened up Instagram and Twitter accounts in the name of 'TURN COAT'. She got the name of the product and the symbol of the rising sun printed on the parking ticket, that were collected by customers coming to the mall. While deciding on the pricing she was suggested by her mentor to keep the price very high to recover her R & D costs spent on developing the product. She was a little hesitant to do so and decided to price TURN COAT by covering the cost of producing it plus with reasonable profits

The celebrity appearance of Ralia Kapoor at Vibha's showroom can be categorized as a part of:

1. Advertising
2. Public relations
3. Product placement
4. Sales promotion

Options :

- 485584134025. 1
- 485584134026. 2
- 485584134027. 3
- 485584134028. 4

Question Number : 143 Question Id : 48558433508 Question Type : MCQ Option Shuffling : No Is Question Mandatory : No Calculator : None Response Time : N.A Think Time : N.A Minimum Instruction Time : 0

Correct Marks : 5 Wrong Marks : 1

Question Key Details :

Key	Value
Comprehension	Compl

Case Study (41-45):

Vibha had created a unique all weather jackets which had solar panels embedded in it. The USP of the jacket was that, harnessing the solar energy it could keep the jacket warm like a heater and cold like an air conditioner depending on the weather. Her market was the youth who came out of the comfort of their homes to stay in hostels. The name of her product was 'TURN COAT' which was beautifully written in comic sans font outside her showroom in FLD Mall. The name had a rising sun next to it making it an attractive composition to look at. Vibha was reading a lot of literature on the promotion strategies that she could use. She had already fixed a public appearance by the superstar Ralia Kapoor at her showroom in 15 days. She opened up Instagram and Twitter accounts in the name of 'TURN COAT'. She got the name of the product and the symbol of the rising sun printed on the parking ticket, that were collected by customers coming to the mall. While deciding on the pricing she was suggested by her mentor to keep the price very high to recover her R & D costs spent on developing the product. She was a little hesitant to do so and decided to price TURN COAT by covering the cost of producing it plus with reasonable profits

The pricing technique that was suggested to Vibha and the one that she finally used can be identified as-

- A. Variable pricing
- B. Penetration pricing
- C. Skimming pricing
- D. Fixed cost pricing
- E. Cost-plus pricing

Choose the correct answer from the options given below:

- 1. C & E only
- 2. A & B only
- 3. B & D only
- 4. C & D only

Options :

- 485584134029. 1
- 485584134030. 2
- 485584134031. 3
- 485584134032. 4

Question Number : 144 Question Id : 48558433509 Question Type : MCQ Option Shuffling : No Is Question Mandatory : No Calculator : None Response Time : N.A Think Time : N.A Minimum Instruction Time : 0

Correct Marks : 5 Wrong Marks : 1

Question Key Details :

Key	Value
Comprehension	Comp1

Case Study (41-45):

Vibha had created a unique all weather jackets which had solar panels embedded in it. The USP of the jacket was that, harnessing the solar energy it could keep the jacket warm like a heater and cold like an air conditioner depending on the weather. Her market was the youth who came out of the comfort of their homes to stay in hostels. The name of her product was 'TURN COAT' which was beautifully written in comic sans font outside her showroom in FLD Mall. The name had a rising sun next to it making it an attractive composition to look at. Vibha was reading a lot of literature on the promotion strategies that she could use. She had already fixed a public appearance by the superstar Ralia Kapoor at her showroom in 15 days. She opened up Instagram and Twitter accounts in the name of 'TURN COAT'. She got the name of the product and the symbol of the rising sun printed on the parking ticket, that were collected by customers coming to the mall. While deciding on the pricing she was suggested by her mentor to keep the price very high to recover her R & D costs spent on developing the product. She was a little hesitant to do so and decided to price TURN COAT by covering the cost of producing it plus with reasonable profits

The name of the product and the symbol printed on the parking tickets is an example of :

1. Above-the-line approach
2. Public Relations
3. Ambient (Media Mix)
4. Business Promotion (Sales promotion)

Options :

- 485584134033. 1
- 485584134034. 2
- 485584134035. 3
- 485584134036. 4

Question Number : 145 Question Id : 48558433510 Question Type : MCQ Option Shuffling : No Is Question Mandatory : No Calculator : None Response Time : N.A Think Time : N.A Minimum Instruction Time : 0

Correct Marks : 5 Wrong Marks : 1

Question Key Details :

Key	Value
Comprehension	Comp1

Case Study (41-45):

Vibha had created a unique all weather jackets which had solar panels embedded in it. The USP of the jacket was that, harnessing the solar energy it could keep the jacket warm like a heater and cold like an air conditioner depending on the weather. Her market was the youth who came out of the comfort of their homes to stay in hostels. The name of her product was 'TURN COAT' which was beautifully written in comic sans font outside her showroom in FLD Mall. The name had a rising sun next to it making it an attractive composition to look at. Vibha was reading a lot of literature on the promotion strategies that she could use. She had already fixed a public appearance by the superstar Ralia Kapoor at her showroom in 15 days. She opened up Instagram and Twitter accounts in the name of 'TURN COAT'. She got the name of the product and the symbol of the rising sun printed on the parking ticket, that were collected by customers coming to the mall. While deciding on the pricing she was suggested by her mentor to keep the price very high to recover her R & D costs spent on developing the product. She was a little hesitant to do so and decided to price TURN COAT by covering the cost of producing it plus with reasonable profits

Promoting her product on instagram and twitter accounts would fall under:

1. Above the line approach
2. Below the line approach
3. Through the line approach
4. Indirect sales strategy approach

Options :

- 485584134037. 1
- 485584134038. 2
- 485584134039. 3
- 485584134040. 4

Sub-Section Number :

Sub-Section Id : 4855842424
Question Shuffling Allowed : No
Is Section Default? : null

Question Number : 146 Question Id : 48558433511 Question Type : MCQ Option Shuffling : No Is Question Mandatory : No Calculator : None Response Time : N.A Think Time : N.A Minimum Instruction Time : 0

Correct Marks : 5 Wrong Marks : 1

Question Key Details :

Key	Value
Comprehension	Comp2

Mergers: Read the case and answer the questions (46-50)

Gaurav owned an event management company called 'Lotus Ltd.' in Mumbai. He used to organise weddings, meetings, conferences, etc. These events were full of activities, music, food and entertainment. He used to outsource decoration material, food as well as entertainment from different vendors.

Ms. Geetika was an owner of catering and decoration company called Miles Ltd. in Mumbai. She used to cater the food and decoration needs of various customers such as corporate as well as family functions.

Gaurav & Geetika were performing well in their respective businesses until covid-19 lockdown was introduced. Due to lack of demand for food, decoration and events, both the companies started facing losses. As the lockdown was lifted, nearly after a year, both Gaurav and Geetika were facing problems in managing their increasing operational costs with lesser number of customers. As they were planning to look for better business opportunity, they got to meet each other at an 'exponential' organised by trades of Mumbai at BKC ground.

In this 'exponential', there were different traders sharing their business ideas with each other. Hence, it was here that Gaurav and Geetika decided to restart their business by merging their operations with a new company name. 'G² Lotus Miles Ltd'. They both shared their contacts of vendors and customers with each other and started getting order for events, food, decoration, entertainment, etc. Their business started blooming as their costs were lesser and more customers with demand of services given by Gaurav and Geetika.

Now its been two years that both of them have grown their business into other cities of Maharashtra like, Pune, Ahmednagar and Nagpur under the company name of 'G² Lotus Miles Ltd'. The company is growing with increased annual sales of 30%.

Which of the following is applicable in case of "G² Lotus Miles ltd"?

1. Product extension merger
2. Market extension merger
3. Vertical merger
4. Horizontal merger

Options :

485584134041. 1
485584134042. 2
485584134043. 3
485584134044. 4

Question Number : 147 Question Id : 48558433512 Question Type : MCQ Option Shuffling : No Is Question Mandatory : No Calculator : None Response Time : N.A Think Time : N.A Minimum Instruction Time : 0

Correct Marks : 5 Wrong Marks : 1

Question Key Details :

Key	Value
Comprehension	Comp2

Mergers: Read the case and answer the questions (46-50)

Gaurav owned an event management company called 'Lotus Ltd.' in Mumbai. He used to organise weddings, meetings, conferences, etc. These events were full of activities, music, food and entertainment. He used to outsource decoration material, food as well as entertainment from different vendors.

Ms. Geetika was an owner of catering and decoration company called Miles Ltd. in Mumbai. She used to cater the food and decoration needs of various customers such as corporate as well as family functions.

Gaurav & Geetika were performing well in their respective businesses until covid-19 lockdown was introduced. Due to lack of demand for food, decoration and events, both the companies started facing losses. As the lockdown was lifted, nearly after a year, both Gaurav and Geetika were facing problems in managing their increasing operational costs with lesser number of customers. As they were planning to look for better business opportunity, they got to meet each other at an 'exponential' organised by trades of Mumbai at BKC ground.

In this 'exponential', there were different traders sharing their business ideas with each other. Hence, it was here that Gaurav and Geetika decided to restart their business by merging their operations with a new company name. 'G² Lotus Miles Ltd'. They both shared their contacts of vendors and customers with each other and started getting order for events, food, decoration, entertainment, etc. Their business started blooming as their costs were lesser and more customers with demand of services given by Gaurav and Geetika.

Now its been two years that both of them have grown their business into other cities of Maharashtra like, Pune, Ahmednagar and Nagpur under the company name of 'G² Lotus Miles Ltd'. The company is growing with increased annual sales of 30%.

The new company so formed "G² Lotus Miles Ltd" is an example of:

1. Acquisition
2. Franchising
3. Amalgamation
4. Absorption

Options :

- 485584134045. 1
- 485584134046. 2
- 485584134047. 3
- 485584134048. 4

Question Number : 148 Question Id : 48558433513 Question Type : MCQ Option Shuffling : No Is Question Mandatory : No Calculator : None Response Time : N.A Think Time : N.A Minimum Instruction Time : 0

Correct Marks : 5 Wrong Marks : 1

Question Key Details :

Key	Value
-----	-------

Mergers: Read the case and answer the questions (46-50)

Gaurav owned an event management company called 'Lotus Ltd.' in Mumbai. He used to organise weddings, meetings, conferences, etc. These events were full of activities, music, food and entertainment. He used to outsource decoration material, food as well as entertainment from different vendors.

Ms. Geetika was an owner of catering and decoration company called Miles Ltd. in Mumbai. She used to cater the food and decoration needs of various customers such as corporate as well as family functions.

Gaurav & Geetika were performing well in their respective businesses until covid-19 lockdown was introduced. Due to lack of demand for food, decoration and events, both the companies started facing losses. As the lockdown was lifted, nearly after a year, both Gaurav and Geetika were facing problems in managing their increasing operational costs with lesser number of customers. As they were planning to look for better business opportunity, they got to meet each other at an 'exponential' organised by trades of Mumbai at BKC ground.

In this 'exponential', there were different traders sharing their business ideas with each other. Hence, it was here that Gaurav and Geetika decided to restart their business by merging their operations with a new company name. 'G² Lotus Miles Ltd'. They both shared their contacts of vendors and customers with each other and started getting order for events, food, decoration, entertainment, etc. Their business started blooming as their costs were lesser and more customers with demand of services given by Gaurav and Geetika.

Now its been two years that both of them have grown their business into other cities of Maharashtra like, Pune, Ahmednagar and Nagpur under the company name of 'G² Lotus Miles Ltd'. The company is growing with increased annual sales of 30%.

"G² Lotus Miles Ltd." is related to-

1. Manufacturing
2. Service
3. Distribution
4. Trading

Options :

485584134049. 1
 485584134050. 2
 485584134051. 3
 485584134052. 4

Question Number : 149 Question Id : 48558433514 Question Type : MCQ Option Shuffling : No Is Question Mandatory : No Calculator : None Response Time : N.A Think Time : N.A Minimum Instruction Time : 0

Correct Marks : 5 Wrong Marks : 1

Question Key Details :

Key	Value
Comprehension	Comp2

Mergers: Read the case and answer the questions (46-50)

Gaurav owned an event management company called 'Lotus Ltd.' in Mumbai. He used to organise weddings, meetings, conferences, etc. These events were full of activities, music, food and entertainment. He used to outsource decoration material, food as well as entertainment from different vendors.

Ms. Geetika was an owner of catering and decoration company called Miles Ltd. in Mumbai. She used to cater the food and decoration needs of various customers such as corporate as well as family functions.

Gaurav & Geetika were performing well in their respective businesses until covid-19 lockdown was introduced. Due to lack of demand for food, decoration and events, both the companies started facing losses. As the lockdown was lifted, nearly after a year, both Gaurav and Geetika were facing problems in managing their increasing operational costs with lesser number of customers. As they were planning to look for better business opportunity, they got to meet each other at an 'exponential' organised by trades of Mumbai at BKC ground.

In this 'exponential', there were different traders sharing their business ideas with each other. Hence, it was here that Gaurav and Geetika decided to restart their business by merging their operations with a new company name. 'G² Lotus Miles Ltd'. They both shared their contacts of vendors and customers with each other and started getting order for events, food, decoration, entertainment, etc. Their business started blooming as their costs were lesser and more customers with demand of services given by Gaurav and Geetika.

Now its been two years that both of them have grown their business into other cities of Maharashtra like, Pune, Ahmednagar and Nagpur under the company name of 'G² Lotus Miles Ltd'. The company is growing with increased annual sales of 30%.

Match List I with List II

LIST I		LIST II	
A.	Event Management Company	I.	Miles Ltd
B.	External Expansion	II.	Lotus Ltd.
C.	Operational synergy	III.	Merger
D.	Catering and decoration company	IV.	G ² Lotus Miles Ltd

Choose the correct answer from the options given below:

1. A-I, B-III, C-II, D-IV
2. A-II, B-III, C-IV, D-I
3. A-III, B-II, C-IV, D-I
4. A-IV, B-III, C-II, D-I

Options :

485584134053. 1
485584134054. 2
485584134055. 3
485584134056. 4

Question Number : 150 Question Id : 48558433515 Question Type : MCQ Option Shuffling : No Is Question Mandatory : No Calculator : None Response Time : N.A Think Time : N.A Minimum Instruction Time : 0

Correct Marks : 5 Wrong Marks : 1

Question Key Details :

Key	Value
Comprehension	Comp2

Mergers: Read the case and answer the questions (46-50)

Gaurav owned an event management company called 'Lotus Ltd.' in Mumbai. He used to organise weddings, meetings, conferences, etc. These events were full of activities, music, food and entertainment. He used to outsource decoration material, food as well as entertainment from different vendors.

Ms. Geetika was an owner of catering and decoration company called Miles Ltd. in Mumbai. She used to cater the food and decoration needs of various customers such as corporate as well as family functions.

Gaurav & Geetika were performing well in their respective businesses until covid-19 lockdown was introduced. Due to lack of demand for food, decoration and events, both the companies started facing losses. As the lockdown was lifted, nearly after a year, both Gaurav and Geetika were facing problems in managing their increasing operational costs with lesser number of customers. As they were planning to look for better business opportunity, they got to meet each other at an 'exponential' organised by trades of Mumbai at BKC ground.

In this 'exponential', there were different traders sharing their business ideas with each other. Hence, it was here that Gaurav and Geetika decided to restart their business by merging their operations with a new company name. 'G² Lotus Miles Ltd'. They both shared their contacts of vendors and customers with each other and started getting order for events, food, decoration, entertainment, etc. Their business started blooming as their costs were lesser and more customers with demand of services given by Gaurav and Geetika.

Now its been two years that both of them have grown their business into other cities of Maharashtra like, Pune, Ahmednagar and Nagpur under the company name of 'G² Lotus Miles Ltd'. The company is growing with increased annual sales of 30%.

If Gaurav could raise sufficient funds to acquire 'Miles Ltd'. This acquisition would be called:

1. Friendly Acquisition
2. Reverse Acquisition
3. Back flip Acquisition
4. Hostile Acquisition

Options :

485584134057. 1
485584134058. 2
485584134059. 3
485584134060. 4

Geography

Group Number :	7
Group Id :	485584745
Group Maximum Duration :	45
Group Minimum Duration :	45
Show Attended Group? :	No
Edit Attended Group? :	No
Break time :	0

Group Marks : 200
Is this Group for Examiner? : No
Examiner permission : Cant View
Show Progress Bar? : No

Geography

Section Id : 485584859
Section Number : 1
Section type : Online
Mandatory or Optional : Mandatory
Number of Questions : 50
Number of Questions to be attempted : 40
Section Marks : 200
Enable Mark as Answered Mark for Review and Clear Response : Yes
Maximum Instruction Time : 0
Sub-Section Number : 1
Sub-Section Id : 4855842425
Question Shuffling Allowed : Yes
Is Section Default? : null

Question Number : 151 Question Id : 48558433216 Question Type : MCQ Option Shuffling : No Is Question Mandatory : No Calculator : None Response Time : N.A Think Time : N.A Minimum Instruction Time : 0

Correct Marks : 5 Wrong Marks : 1

Question Key Details :

Key	Value
Comprehension	MCQ

"Human Geography is the synthetic study of relationship between human societies and earth's surface" among the following who gave the above definition on Human Geography.

1. Paul Vidal de la Blache
2. Ellen C Semple
3. Ratzel
4. Ralph W. Emerson

Options :

485584132861. 1
485584132862. 2
485584132863. 3
485584132864. 4

Question Number : 152 Question Id : 48558433217 Question Type : MCQ Option Shuffling : No Is Question Mandatory : No Calculator : None Response Time : N.A Think Time : N.A Minimum Instruction Time : 0

Correct Marks : 5 Wrong Marks : 1

Question Key Details :

Key	Value
Comprehension	MCQ

Which one of the following is the name of Ethiopian capital?

1. Al Qahirah
2. Tehran
3. Canberra
4. Addis Ababa

Options :

485584132865. 1
485584132866. 2
485584132867. 3
485584132868. 4

Question Number : 153 Question Id : 48558433218 Question Type : MCQ Option Shuffling : No Is Question Mandatory : No Calculator : None Response Time : N.A Think Time : N.A Minimum Instruction Time : 0

Correct Marks : 5 Wrong Marks : 1

Question Key Details :

Key	Value
Comprehension	MCQ

What is the percentage of world population living in urban areas in 2017?

1. 37%
2. 48%
3. 58%
4. 54%

Options :

485584132869. 1
485584132870. 2
485584132871. 3
485584132872. 4

Question Number : 154 Question Id : 48558433219 Question Type : MCQ Option Shuffling : No Is Question Mandatory : No Calculator : None Response Time : N.A Think Time : N.A Minimum Instruction Time : 0

Correct Marks : 5 Wrong Marks : 1

Question Key Details :

Key	Value
Comprehension	MCQ

Which one of the following is not the approach of human Geography?

1. Regional Analysis
2. Areal Differentiation
3. Technological Analysis
4. Post-Modernism

Options :

485584132873. 1
485584132874. 2
485584132875. 3
485584132876. 4

Question Number : 155 Question Id : 48558433220 Question Type : MCQ Option Shuffling : No Is Question Mandatory : No Calculator : None Response Time : N.A Think Time : N.A Minimum Instruction Time : 0

Correct Marks : 5 Wrong Marks : 1

Question Key Details :

Key	Value
Comprehension	MCQ

Who introduced stop and go determinism?

1. Ratzal
2. Ellian sample
3. Griffith Taylor
4. Paul Vidal de la Blache

Options :

485584132877. 1
485584132878. 2
485584132879. 3
485584132880. 4

Question Number : 156 Question Id : 48558433221 Question Type : MCQ Option Shuffling : No Is Question Mandatory : No Calculator : None Response Time : N.A Think Time : N.A Minimum Instruction Time : 0

Correct Marks : 5 Wrong Marks : 1

Question Key Details :

Key	Value
Comprehension	MCQ

"This happens when the birth rate is more than the death rate between two points of time" choose the right from the following.

1. Stationary Population
2. Actual Growth of Population
3. Negative Growth of Population
4. Positive Growth of Population

Options :

- 485584132881. 1
- 485584132882. 2
- 485584132883. 3
- 485584132884. 4

Question Number : 157 Question Id : 48558433222 Question Type : MCQ Option Shuffling : No Is Question Mandatory : No Calculator : None Response Time : N.A Think Time : N.A Minimum Instruction Time : 0

Correct Marks : 5 Wrong Marks : 1

Question Key Details :

Key	Value
Comprehension	MCQ

The 'Alaskan Highway' links which of the following?

1. British Colombia to St. John city
2. Edmonton to Anchorage
3. Darwin to Malborne
4. Algiers to Conakry

Options :

- 485584132885. 1
- 485584132886. 2
- 485584132887. 3
- 485584132888. 4

Question Number : 158 Question Id : 48558433223 Question Type : MCQ Option Shuffling : No Is Question Mandatory : No Calculator : None Response Time : N.A Think Time : N.A Minimum Instruction Time : 0

Correct Marks : 5 Wrong Marks : 1

Question Key Details :

Key	Value
Comprehension	MCQ

When and by whom Human development index was created?

1. Prof A. Shaws (1991)
2. Prof Amartya Sen, 1990
3. Dr. Mahbub-Ul-Haq, 1990
4. Prof Amartya Sen 1991

Options :

- 485584132889. 1
- 485584132890. 2
- 485584132891. 3
- 485584132892. 4

Question Number : 159 Question Id : 48558433224 Question Type : MCQ Option Shuffling : No Is Question Mandatory : No Calculator : None Response Time : N.A Think Time : N.A Minimum Instruction Time : 0

Correct Marks : 5 Wrong Marks : 1

Question Key Details :

Key	Value
Comprehension	MCQ

Famous pipeline 'Big Inch' is located in _____.

1. Saudi Arabia
2. Qutar
3. USA
4. Venezuela

Options :

- 485584132893. 1
- 485584132894. 2
- 485584132895. 3
- 485584132896. 4

Question Number : 160 Question Id : 48558433225 Question Type : MCQ Option Shuffling : No Is Question Mandatory : No Calculator : None Response Time : N.A Think Time : N.A Minimum Instruction Time : 0

Correct Marks : 5 Wrong Marks : 1

Question Key Details :

Key	Value
Comprehension	MCQ

How many of the following cities in world have attained the million status at the beginning of 2005.

1. 206
2. 437
3. 469
4. 438

Options :

- 485584132897. 1
- 485584132898. 2
- 485584132899. 3
- 485584132900. 4

Question Number : 161 Question Id : 48558433226 Question Type : MCQ Option Shuffling : No Is Question Mandatory : No Calculator : None Response Time : N.A Think Time : N.A Minimum Instruction Time : 0

Correct Marks : 5 Wrong Marks : 1

Question Key Details :

Key	Value
Comprehension	MCQ

Which among the following is not a factor that discourage women to migrate from rural to urban areas?

1. Shortage of housing
2. Paucity of job opportunities
3. Low cost of living
4. Lack of security in cities

Options :

- 485584132901. 1
- 485584132902. 2
- 485584132903. 3
- 485584132904. 4

Question Number : 162 Question Id : 48558433227 Question Type : MCQ Option Shuffling : No Is Question Mandatory : No Calculator : None Response Time : N.A Think Time : N.A Minimum Instruction Time : 0

Correct Marks : 5 Wrong Marks : 1

Question Key Details :

Key	Value
Comprehension	MCQ

In the Age sex pyramid a narrow base and a tapered top represents which of the following?

1. Declining Population Pyramid
2. Constant Population Pyramid
3. Expanding Population Pyramid
4. Triangular Shaped Pyramid

Options :

- 485584132905. 1
- 485584132906. 2
- 485584132907. 3
- 485584132908. 4

Question Number : 163 Question Id : 48558433228 Question Type : MCQ Option Shuffling : No Is Question Mandatory : No Calculator : None Response Time : N.A Think Time : N.A Minimum Instruction Time : 0

Correct Marks : 5 Wrong Marks : 1

Question Key Details :

Key	Value
Comprehension	MCQ

Which one of the following states of India has the highest female literacy?

1. Tamil Nadu
2. Punjab
3. Haryana
4. Kerala

Options :

- 485584132909. 1
- 485584132910. 2
- 485584132911. 3
- 485584132912. 4

Question Number : 164 Question Id : 48558433229 Question Type : MCQ Option Shuffling : No Is Question Mandatory : No Calculator : None Response Time : N.A Think Time : N.A Minimum Instruction Time : 0

Correct Marks : 5 Wrong Marks : 1

Question Key Details :

Key	Value
Comprehension	MCQ

The first complete census was conducted in India in which year ?

1. 1861
2. 1871
3. 1881
4. 1891

Options :

485584132913. 1
485584132914. 2
485584132915. 3
485584132916. 4

Question Number : 165 Question Id : 48558433230 Question Type : MCQ Option Shuffling : No Is Question Mandatory : No Calculator : None Response Time : N.A Think Time : N.A Minimum Instruction Time : 0

Correct Marks : 5 Wrong Marks : 1

Question Key Details :

Key	Value
Comprehension	MCQ

How many Railway Zones are there in India?

1. 12
2. 14
3. 15
4. 16

Options :

485584132917. 1
485584132918. 2
485584132919. 3
485584132920. 4

Question Number : 166 Question Id : 48558433231 Question Type : MCQ Option Shuffling : No Is Question Mandatory : No Calculator : None Response Time : N.A Think Time : N.A Minimum Instruction Time : 0

Correct Marks : 5 Wrong Marks : 1

Question Key Details :

Key	Value
Comprehension	MCQ

According to Grierson (Linguistic Survey of India 1903-1928) how many languages were there in India?

1. 544
2. 22
3. 179
4. 267

Options :

- 485584132921. 1
- 485584132922. 2
- 485584132923. 3
- 485584132924. 4

Question Number : 167 Question Id : 48558433232 Question Type : MCQ Option Shuffling : No Is Question Mandatory : No Calculator : None Response Time : N.A Think Time : N.A Minimum Instruction Time : 0

Correct Marks : 5 Wrong Marks : 1

Question Key Details :

Key	Value
Comprehension	MCQ

Which phase is referred to as the period of population explosion in India?

1. Phase I (1901-1921)
2. Phase II (1921-1951)
3. Phase III (1951-1981)
4. Phase IV (Post 1981 till present)

Options :

- 485584132925. 1
- 485584132926. 2
- 485584132927. 3
- 485584132928. 4

Question Number : 168 Question Id : 48558433233 Question Type : MCQ Option Shuffling : No Is Question Mandatory : No Calculator : None Response Time : N.A Think Time : N.A Minimum Instruction Time : 0

Correct Marks : 5 Wrong Marks : 1

Question Key Details :

Key	Value
Comprehension	MCQ

Which one of the following town / cities has not been developed as an administrative headquarters after Independence?

1. Jamshedpur
2. Chandigarh
3. Gandhinagar
4. Dispur

Options :

485584132929. 1
485584132930. 2
485584132931. 3
485584132932. 4

Question Number : 169 Question Id : 48558433234 Question Type : MCQ Option Shuffling : No Is Question Mandatory : No Calculator : None Response Time : N.A Think Time : N.A Minimum Instruction Time : 0

Correct Marks : 5 Wrong Marks : 1

Question Key Details :

Key	Value
Comprehension	MCQ

The famous Nehru Trophy Boat Race (Vallamkali) is held in the backwater of which of the following?

1. Andhra Pradesh
2. Goa
3. Karnataka
4. Kerala

Options :

485584132933. 1
485584132934. 2
485584132935. 3
485584132936. 4

Question Number : 170 Question Id : 48558433235 Question Type : MCQ Option Shuffling : No Is Question Mandatory : No Calculator : None Response Time : N.A Think Time : N.A Minimum Instruction Time : 0

Correct Marks : 5 Wrong Marks : 1

Question Key Details :

Key	Value
Comprehension	MCQ

Which one among the following classes comprises the maximum number of town / cities in India as per Census of India 2011?

1. Class II
2. Class III
3. Class IV
4. Class V

Options :

485584132937. 1
485584132938. 2
485584132939. 3
485584132940. 4

Question Number : 171 Question Id : 48558433236 Question Type : MCQ Option Shuffling : No Is Question Mandatory : No Calculator : None Response Time : N.A Think Time : N.A Minimum Instruction Time : 0

Correct Marks : 5 Wrong Marks : 1

Question Key Details :

Key	Value
Comprehension	MCQ

Which one of the following is an example of Ancient Town in India?

1. Prayag
2. Hyderabad
3. Delhi
4. Mumbai

Options :

485584132941. 1
485584132942. 2
485584132943. 3
485584132944. 4

Question Number : 172 Question Id : 48558433237 Question Type : MCQ Option Shuffling : No Is Question Mandatory : No Calculator : None Response Time : N.A Think Time : N.A Minimum Instruction Time : 0

Correct Marks : 5 Wrong Marks : 1

Question Key Details :

Key	Value
Comprehension	MCQ

Which of the following Indian state has the highest density of population?

1. Bihar
2. Kerala
3. Uttar Pradesh
4. West Bengal

Options :

485584132945. 1
485584132946. 2
485584132947. 3
485584132948. 4

Question Number : 173 Question Id : 48558433238 Question Type : MCQ Option Shuffling : No Is Question Mandatory : No Calculator : None Response Time : N.A Think Time : N.A Minimum Instruction Time : 0

Correct Marks : 5 Wrong Marks : 1

Question Key Details :

Key	Value
Comprehension	MCQ

The Ocean noise levels in 2003-04 were about _____ higher than in 1964-1966.

1. 20 decibels
2. 10-12 decibels
3. 5 decibels
4. 15-18 decibels

Options :

485584132949. 1
485584132950. 2
485584132951. 3
485584132952. 4

Question Number : 174 Question Id : 48558433239 Question Type : MCQ Option Shuffling : No Is Question Mandatory : No Calculator : None Response Time : N.A Think Time : N.A Minimum Instruction Time : 0

Correct Marks : 5 Wrong Marks : 1

Question Key Details :

Key	Value
Comprehension	MCQ

Which one of the following contributes to the maximum length of the roads in India?

1. National Highway
2. State Highway
3. Districts Roads
4. Rural Roads

Options :

485584132953. 1
485584132954. 2
485584132955. 3
485584132956. 4

Question Number : 175 Question Id : 48558433240 Question Type : MCQ Option Shuffling : No Is Question Mandatory : No Calculator : None Response Time : N.A Think Time : N.A Minimum Instruction Time : 0

Correct Marks : 5 Wrong Marks : 1

Question Key Details :

Key	Value
Comprehension	MCQ

Which one of the following is an Inland Port?

1. Kochhi Port
2. Ennore Port
3. Kolkata Port
4. Haldia Port

Options :

485584132957. 1
485584132958. 2
485584132959. 3
485584132960. 4

Question Number : 176 Question Id : 48558433241 Question Type : MCQ Option Shuffling : No Is Question Mandatory : No Calculator : None Response Time : N.A Think Time : N.A Minimum Instruction Time : 0

Correct Marks : 5 Wrong Marks : 1

Question Key Details :

Key	Value
Comprehension	MCQ

Arrange the following approaches in the order?

- A. Spatial organization
- B. Exploration and description
- C. Post modernism in geography
- D. Regional Analysis

Choose the correct answer from the options given below:

- 1. A, C, B, D
- 2. B, D, A, C
- 3. C, D, B, A
- 4. D, A, C, B

Options :

- 485584132961. 1
- 485584132962. 2
- 485584132963. 3
- 485584132964. 4

Question Number : 177 Question Id : 48558433242 Question Type : MCQ Option Shuffling : No Is Question Mandatory : No Calculator : None Response Time : N.A Think Time : N.A Minimum Instruction Time : 0

Correct Marks : 5 Wrong Marks : 1

Question Key Details :

Key	Value
Comprehension	MCQ

Arrange the following continents in descending order of population density

- A. North America
- B. Africa
- C. Oceania
- D. Asia

Choose the correct answer from the options given below:

- 1. D, B, A, C
- 2. D, C, B, A
- 3. D, A, B, C
- 4. D, A, C, B

Options :

- 485584132965. 1
- 485584132966. 2
- 485584132967. 3
- 485584132968. 4

Question Number : 178 Question Id : 48558433243 Question Type : MCQ Option Shuffling : No Is Question Mandatory : No Calculator : None Response Time : N.A Think Time : N.A Minimum Instruction Time : 0

Correct Marks : 5 Wrong Marks : 1

Question Key Details :

Key	Value
Comprehension	MCQ

Arrange the below mentioned Urban classification in correct sequence (small to large).

- A. City
- B. Conurbation
- C. Megalopolis
- D. Million City

Choose the correct answer from the options given below:

- 1. A, B, C, D
- 2. A, D, B, C
- 3. A, C, B, D
- 4. C, B, D, A

Options :

- 485584132969. 1
- 485584132970. 2
- 485584132971. 3
- 485584132972. 4

Question Number : 179 Question Id : 48558433244 Question Type : MCQ Option Shuffling : No Is Question Mandatory : No Calculator : None Response Time : N.A Think Time : N.A Minimum Instruction Time : 0

Correct Marks : 5 Wrong Marks : 1

Question Key Details :

Key	Value
Comprehension	MCQ

Arrange the below mentioned technology phases with population growth periods in correct order from birth of Christ to Present.

- A. Biotechnology
- B. Age of European exploration and colonization
- C. Information and computers
- D. Transportation development

Choose the correct answer from the options given below:

- 1. B, D, A, C
- 2. B, D, C, A
- 3. B, C, D, A
- 4. B, A, D, C

Options :

- 485584132973. 1
- 485584132974. 2
- 485584132975. 3
- 485584132976. 4

Question Number : 180 Question Id : 48558433245 Question Type : MCQ Option Shuffling : No Is Question Mandatory : No Calculator : None Response Time : N.A Think Time : N.A Minimum Instruction Time : 0

Correct Marks : 5 Wrong Marks : 1

Question Key Details :

Key	Value
Comprehension	MCQ

Arrange the following airports of India from east to west.

- A. Shillong
- B. Allahabad
- C. Udaipur
- D. Patna

Choose the correct answer from the options given below:

- 1. A, D, B, C
- 2. A, D, C, B
- 3. D, A, C, B
- 4. D, A, B, C

Options :

- 485584132977. 1
- 485584132978. 2
- 485584132979. 3
- 485584132980. 4

Question Number : 181 Question Id : 48558433246 Question Type : MCQ Option Shuffling : No Is Question Mandatory : No Calculator : None Response Time : N.A Think Time : N.A Minimum Instruction Time : 0

Correct Marks : 5 Wrong Marks : 1

Question Key Details :

Key	Value
Comprehension	MCQ

Choose indicators used to assess Human Development Index from below.

- A. Purchasing Power
- B. Happiness
- C. Life expectancy at Birth
- D. Gross Enrollment Ratio

Choose the correct answer from the options given below:

1. A, B, D only
2. A, C, D only
3. B, C, D only
4. B, A, C only

Options :

- 485584132981. 1
- 485584132982. 2
- 485584132983. 3
- 485584132984. 4

Question Number : 182 Question Id : 48558433247 Question Type : MCQ Option Shuffling : No Is Question Mandatory : No Calculator : None Response Time : N.A Think Time : N.A Minimum Instruction Time : 0

Correct Marks : 5 Wrong Marks : 1

Question Key Details :

Key	Value
Comprehension	MCQ

Major areas of rice production are:

- A. Bihar
- B. Karnataka
- C. West Bengal
- D. Chhattisgarh

Choose the correct answer from the options given below:

1. A, B and D only
2. B, C and D only
3. A, C and D only
4. A, B and C only

Options :

- 485584132985. 1
- 485584132986. 2
- 485584132987. 3
- 485584132988. 4

Question Number : 183 Question Id : 48558433248 Question Type : MCQ Option Shuffling : No Is Question Mandatory : No Calculator : None Response Time : N.A Think Time : N.A Minimum Instruction Time : 0

Correct Marks : 5 Wrong Marks : 1

Question Key Details :

Key	Value
Comprehension	MCQ

Read the following about Indira Gandhi Canal Command Area carefully.

- A. Indira Gandhi Canal was previously known as the Rajasthan Canal.
- B. The Canal Project was launched on 31 March ,1948.
- C. The Canal originates at Herike barrage in Punjab.
- D. They command area of stage-I lies in Ganganagar, Hanumangarh and northern part of Bikaner districts.

Choose the correct answer from the options given below:

- 1. A, B and C only
- 2. A, B and D only
- 3. A, C and D only
- 4. B, C and D only

Options :

- 485584132989. 1
- 485584132990. 2
- 485584132991. 3
- 485584132992. 4

Question Number : 184 Question Id : 48558433249 Question Type : MCQ Option Shuffling : No Is Question Mandatory : No Calculator : None Response Time : N.A Think Time : N.A Minimum Instruction Time : 0

Correct Marks : 5 Wrong Marks : 1

Question Key Details :

Key	Value
Comprehension	MCQ

Read the following statements about the North Western region of India carefully.

- A. Rajasthan is rich in building stones i.e. sandstone, granite, marble.
- B. Gujarat does not have petroleum deposits.
- C. Gujarat and Rajasthan both have rich source of salt
- D. This region provide raw material for Cement Industry

Choose the correct answer from the options given below:

- 1. A, B and C only
- 2. A, B and D only
- 3. A, C and D only
- 4. B, C and D only

Options :

485584132993. 1
485584132994. 2
485584132995. 3
485584132996. 4

Question Number : 185 Question Id : 48558433250 Question Type : MCQ Option Shuffling : No Is Question Mandatory : No Calculator : None Response Time : N.A Think Time : N.A Minimum Instruction Time : 0

Correct Marks : 5 Wrong Marks : 1

Question Key Details :

Key	Value
Comprehension	MCQ

Which are the characteristics of Mechanised grain farming?

- A. It is practised in the semi-arid land of mid-latitudes.
- B. The size of the farm is too large.
- C. Variety of crops are grown with livestock.
- D. Entire operations of cultivation are mechanised.

Choose the correct answer from the options given below:

- 1. B, C and D only
- 2. A, B and D only
- 3. A, C and D only
- 4. A, B and C only

Options :

485584132997. 1
485584132998. 2
485584132999. 3
485584133000. 4

Question Number : 186 Question Id : 48558433251 Question Type : MCQ Option Shuffling : No Is Question Mandatory : No Calculator : None Response Time : N.A Think Time : N.A Minimum Instruction Time : 0

Correct Marks : 5 Wrong Marks : 1

Question Key Details :

Key	Value
Comprehension	MCQ

Match List I with List II

LIST I (Country)		LIST II (Mega city)	
A.	Peru	I.	Jakarta
B.	Indonesia	II.	Manila
C.	Brazil	III.	Lima
D.	Philippines	IV.	Sao Paulo

Choose the correct answer from the options given below:

1. A-III, B-II, C-II, D-IV
2. A-III, B-I, C-IV, D-II
3. A-IV, B-II, C-I, D-III
4. A-IV, B-III, C-II, D-I

Options :

485584133001. 1
485584133002. 2
485584133003. 3
485584133004. 4

Question Number : 187 Question Id : 48558433252 Question Type : MCQ Option Shuffling : No Is Question Mandatory : No Calculator : None Response Time : N.A Think Time : N.A Minimum Instruction Time : 0

Correct Marks : 5 Wrong Marks : 1

Question Key Details :

Key	Value
Comprehension	MCQ

Match List I with List II

LIST I Pollution		LIST II Sources of pollution	
A.	Air pollution	I.	Urban run-off
B.	Water pollution	II.	Advertising media
C.	Land pollution	III.	Combustion of biofuels
D.	Noise pollution	IV.	Improper human activities

Choose the correct answer from the options given below:

1. A-IV, B-I, C-II, D-III
2. A-IV, B-II, C-III, D-I
3. A-III, B-I, C-IV, D-II
4. A-III, B-II, C-I, D-IV

Options :

485584133005. 1
485584133006. 2
485584133007. 3
485584133008. 4

Question Number : 188 Question Id : 48558433253 Question Type : MCQ Option Shuffling : No Is Question Mandatory : No Calculator : None Response Time : N.A Think Time : N.A Minimum Instruction Time : 0

Correct Marks : 5 Wrong Marks : 1

Question Key Details :

Key	Value
Comprehension	MCQ

Match List I with List II

LIST I States		LIST II Ports	
A.	Gujarat	I.	Mangaluru
B.	Maharashtra	II.	Kandla
C.	Karnataka	III.	Kochchi
D.	Kerala	IV.	Jawaharlal Nehru Port

Choose the correct answer from the options given below:

1. A-II, B-I, C-III, D-IV
2. A-II, B-IV, C-I, D-III
3. A-II, B-IV, C-III, D-I
4. A-IV, B-II, C-I, D-III

Options :

- 485584133009. 1
- 485584133010. 2
- 485584133011. 3
- 485584133012. 4

Question Number : 189 Question Id : 48558433254 Question Type : MCQ Option Shuffling : No Is Question Mandatory : No Calculator : None Response Time : N.A Think Time : N.A Minimum Instruction Time : 0

Correct Marks : 5 Wrong Marks : 1

Question Key Details :

Key	Value
Comprehension	MCQ

Match List I with List II

LIST I (Mining area)		LIST II (State)	
A.	kendujhar	I.	Maharashtra
B.	Ratnagiri	II.	Madhya Pradesh
C.	katni	III.	Rajasthan
D.	khetri	IV.	Odisha

Choose the correct answer from the options given below:

1. A-II, B-I, C-IV, D-III
2. A-IV, B-I, C-II, D-III
3. A-IV, B-II, C-III, D-I
4. A-II, B-III, C-IV, D-I

Options :

485584133013. 1
485584133014. 2
485584133015. 3
485584133016. 4

Question Number : 190 Question Id : 48558433255 Question Type : MCQ Option Shuffling : No Is Question Mandatory : No Calculator : None Response Time : N.A Think Time : N.A Minimum Instruction Time : 0

Correct Marks : 5 Wrong Marks : 1

Question Key Details :

Key	Value
Comprehension	MCQ

Match List I with List II

LIST I Specialised functions		LIST II Port	
A.	Ports of Call	I.	Copenhagen
B.	Packet Station	II.	Kochi
C.	Entrepot Ports	III.	Aden
D.	Navel Ports	IV.	Dover

Choose the correct answer from the options given below:

1. A-III, B-IV, C-I, D-II
2. A-II, B-III, C-IV, D-I
3. A-I, B-II, C-III, D-IV
4. A-IV, B-I, C-II, D-III

Options :

485584133017. 1

485584133018. 2
485584133019. 3
485584133020. 4

Sub-Section Number : 2
Sub-Section Id : 4855842426
Question Shuffling Allowed : No
Is Section Default? : null

Question Number : 191 Question Id : 48558433256 Question Type : MCQ Option Shuffling : No Is Question Mandatory : No Calculator : None Response Time : N.A Think Time : N.A Minimum Instruction Time : 0

Correct Marks : 5 Wrong Marks : 1

Question Key Details :

Key	Value
Comprehension	Comp1

Read the passage and answer 5 questions that follow:

High technology, or simply high-tech, is the latest generation of manufacturing activities. It is best understood as the application of intensive research and development (R and D) efforts leading to the manufacture of products of an advanced scientific and engineering character. Professional (white collar) workers make up a large share of the total workforce. These highly skilled specialists greatly outnumber the actual production (blue collar) workers. Robotics on the assembly line, computer-aided design (CAD) and manufacturing, electronic controls of smelting and refining processes, and the constant development of new chemical and pharmaceutical products are notable examples of a high-tech industry.

Neatly spaced, low, modern, dispersed, office-plant-lab buildings rather than massive assembly structures, factories and storage areas mark the-tech industrial landscape. Planned business parks for high-tech start-ups have become part of regional and local development schemes.

High-tech industries which are regionally concentrated, self-sustained and highly specialised are called technopolies. The Silicon Valley near San Francisco and Silicon Forest near Seattle are examples of technopolies.

Manufacturing contributes significantly to the world economy. Iron and steel, textiles, automobiles, petrochemicals and electronics are some of the world's most important manufacturing industries.

Which one of the following is not true about High-Tech industry?

1. High-Tech is latest manufacturing Industry
2. It is intensive research and development unit
3. It is traditionally located close to the raw materials
4. Absence of massive statements, factories, storage etc.

Options :

485584133021. 1
485584133022. 2
485584133023. 3
485584133024. 4

Question Number : 192 Question Id : 48558433257 Question Type : MCQ Option Shuffling : No Is Question Mandatory : No Calculator : None Response Time : N.A Think Time : N.A Minimum Instruction Time : 0

Correct Marks : 5 Wrong Marks : 1

Question Key Details :

Key	Value
Comprehension	Comp1

Read the passage and answer 5 questions that follow:

High technology, or simply high-tech, is the latest generation of manufacturing activities. It is best understood as the application of intensive research and development (R and D) efforts leading to the manufacture of products of an advanced scientific and engineering character. Professional (white collar) workers make up a large share of the total workforce. These highly skilled specialists greatly outnumber the actual production (blue collar) workers. Robotics on the assembly line, computer-aided design (CAD) and manufacturing, electronic controls of smelting and refining processes, and the constant development of new chemical and pharmaceutical products are notable examples of a high-tech industry.

Neatly spaced, low, modern, dispersed, office-plant-lab buildings rather than massive assembly structures, factories and storage areas mark the-tech industrial landscape. Planned business parks for high-tech start-ups have become part of regional and local development schemes.

High-tech industries which are regionally centred, self-sustained and highly specialised are called technopolies. The Silicon Valley near San Francisco and Silicon Forest near Seattle are examples of technopolies.

Manufacturing contributes significantly to the world economy. Iron and steel, textiles, automobiles, petrochemicals and electronics are some of the world's most important manufacturing industries.

Which one of the following are considered white collar workers?

1. Skilled specialist
2. Engineers
3. Farmers
4. Skilled workers

Options :

- 485584133025. 1
- 485584133026. 2
- 485584133027. 3
- 485584133028. 4

Question Number : 193 Question Id : 48558433258 Question Type : MCQ Option Shuffling : No Is Question Mandatory : No Calculator : None Response Time : N.A Think Time : N.A Minimum Instruction Time : 0

Correct Marks : 5 Wrong Marks : 1

Question Key Details :

Key	Value
Comprehension	Comp1

Read the passage and answer 5 questions that follow:

High technology, or simply high-tech, is the latest generation of manufacturing activities. It is best understood as the application of intensive research and development (R and D) efforts leading to the manufacture of products of an advanced scientific and engineering character. Professional (white collar) workers make up a large share of the total workforce. These highly skilled specialists greatly outnumber the actual production (blue collar) workers. Robotics on the assembly line, computer-aided design (CAD) and manufacturing, electronic controls of smelting and refining processes, and the constant development of new chemical and pharmaceutical products are notable examples of a high-tech industry.

Neatly spaced, low, modern, dispersed, office-plant-lab buildings rather than massive assembly structures, factories and storage areas mark the-tech industrial landscape. Planned business parks for high-tech start-ups have become part of regional and local development schemes.

High-tech industries which are regionally concentrated, self-sustained and highly specialised are called technopolies. The Silicon Valley near San Francisco and Silicon Forest near Seattle are examples of technopolies.

Manufacturing contributes significantly to the world economy. Iron and steel, textiles, automobiles, petrochemicals and electronics are some of the world's most important manufacturing industries.

Which of the following are an example of high-technology industry?

1. Textile production
2. Robotics
3. CAD
4. Pharmaceutical

Options :

- 485584133029. 1
- 485584133030. 2
- 485584133031. 3
- 485584133032. 4

Question Number : 194 Question Id : 48558433259 Question Type : MCQ Option Shuffling : No Is Question Mandatory : No Calculator : None Response Time : N.A Think Time : N.A Minimum Instruction Time : 0

Correct Marks : 5 Wrong Marks : 1

Question Key Details :

Key	Value
Comprehension	Comp1

Read the passage and answer 5 questions that follow:

High technology, or simply high-tech, is the latest generation of manufacturing activities. It is best understood as the application of intensive research and development (R and D) efforts leading to the manufacture of products of an advanced scientific and engineering character. Professional (white collar) workers make up a large share of the total workforce. These highly skilled specialists greatly outnumber the actual production (blue collar) workers. Robotics on the assembly line, computer-aided design (CAD) and manufacturing, electronic controls of smelting and refining processes, and the constant development of new chemical and pharmaceutical products are notable examples of a high-tech industry.

Neatly spaced, low, modern, dispersed, office-plant-lab buildings rather than massive assembly structures, factories and storage areas mark the-tech industrial landscape. Planned business parks for high-tech start-ups have become part of regional and local development schemes.

High-tech industries which are regionally concentrated, self-sustained and highly specialised are called technopolies. The Silicon Valley near San Francisco and Silicon Forest near Seattle are examples of technopolies.

Manufacturing contributes significantly to the world economy. Iron and steel, textiles, automobiles, petrochemicals and electronics are some of the world's most important manufacturing industries.

Which of the following term is used for the usually concentrated, self-sustained and specialised industry?

1. Iron & steel Industry
2. Textile industry
3. Automobile industry
4. Technopolies

Options :

- 485584133033. 1
- 485584133034. 2
- 485584133035. 3
- 485584133036. 4

Question Number : 195 Question Id : 48558433260 Question Type : MCQ Option Shuffling : No Is Question Mandatory : No Calculator : None Response Time : N.A Think Time : N.A Minimum Instruction Time : 0

Correct Marks : 5 Wrong Marks : 1

Question Key Details :

Key	Value
Comprehension	Comp1

Read the passage and answer 5 questions that follow:

High technology, or simply high-tech, is the latest generation of manufacturing activities. It is best understood as the application of intensive research and development (R and D) efforts leading to the manufacture of products of an advanced scientific and engineering character. Professional (white collar) workers make up a large share of the total workforce. These highly skilled specialists greatly outnumber the actual production (blue collar) workers. Robotics on the assembly line, computer-aided design (CAD) and manufacturing, electronic controls of smelting and refining processes, and the constant development of new chemical and pharmaceutical products are notable examples of a high-tech industry.

Neatly spaced, low, modern, dispersed, office-plant-lab buildings rather than massive assembly structures, factories and storage areas mark the-tech industrial landscape. Planned business parks for high-tech start-ups have become part of regional and local development schemes.

High-tech industries which are regionally concentrated, self-sustained and highly specialised are called technopolies. The Silicon Valley near San Francisco and Silicon Forest near Seattle are examples of techonopolies.

Manufacturing contributes significantly to the world economy. Iron and steel, textiles, automobiles, petrochemicals and electronics are some of the world's most important manufacturing industries.

Which of the following workers are greatly affected by High-Tech Industry?

1. White collar workers
2. Blue collar workers
3. Red collar workers
4. Grey collar workers

Options :

- 485584133037. 1
- 485584133038. 2
- 485584133039. 3
- 485584133040. 4

Sub-Section Number : 3
Sub-Section Id : 4855842427
Question Shuffling Allowed : No
Is Section Default? : null

Question Number : 196 Question Id : 48558433261 Question Type : MCQ Option Shuffling : No Is Question Mandatory : No Calculator : None Response Time : N.A Think Time : N.A Minimum Instruction Time : 0

Correct Marks : 5 Wrong Marks : 1

Question Key Details :

Key	Value
Comprehension	Comp2

Read the passage and answer 5 questions that follow:

Watershed management basically refers to efficient management and conservation of surface and groundwater resources. It involves prevention of runoff and shortage and recharge of groundwater through various methods like percolation tanks. Recharge wells. Etc. however. In broad sense watershed management includes conservation. Regeneration and judicious use of all resources- natural (like land water plants and animals) and human with in a watershed. Watershed management aims at bringing about balance between natural resources on the one hand and society on the other. The success of watershed development largely depends upon community participation.

The Central and State Government have initiated many watershed development and management programmes in the country. some of these are being implemented by non-government organisations also. Haryali is a watershed development project sponsored by the Central Government which aims at enabling the rural populations to conserve water for drinking, irrigation, fisheries and afforestation. The Project is being executed by Gram Panchayats with people's participation. Neeru-Meeru (water and you) programme (in Andhra Pradesh) and Arvary Pani Sansad (in Alwar Rajasthan) have taken up constructions of various water-harvesting structures such as percolation tanks. Dug out ponds (Johand). Check dams. etc... through people's participation. Tamil Nadu has made water harvesting structures in the houses compulsory. No building can be constructed without making structures for water harvesting.

watershed development projects in some areas have been successful in rejuvenating environment and economy. However. There are only a few success stories. In majority of cases. The programme is still in its nascent stage. There is a need to generate awareness regarding benefits of watershed development and management among people in the country, and through this integrated water resource management approach water availability can be ensured on sustainable basis.

What is watershed?

1. It is efficient management and conservation of surface and groundwater resources.
2. It is a system of equitable distribution of water in an area.
3. It is a method of storing the canal water.
4. It is harvesting of natural streams.

Options :

- 485584133041. 1
- 485584133042. 2
- 485584133043. 3
- 485584133044. 4

Question Number : 197 Question Id : 48558433262 Question Type : MCQ Option Shuffling : No Is Question Mandatory : No Calculator : None Response Time : N.A Think Time : N.A Minimum Instruction Time : 0

Correct Marks : 5 Wrong Marks : 1

Question Key Details :

Key	Value
Comprehension	Comp2

Read the passage and answer 5 questions that follow:

Watershed management basically refers to efficient management and conservation of surface and groundwater resources. It involves prevention of runoff and shortage and recharge of groundwater through various methods like percolation tanks. Recharge wells. Etc. however. In broad sense watershed management includes conservation. Regeneration and judicious use of all resources- natural (like land water plants and animals) and human with in a watershed. Watershed management aims at bringing about balance between natural resources on the one hand and society on the other. The success of watershed development largely depends upon community participation.

The Central and State Government have initiated many watershed development and management programmes in the country. some of these are being implemented by non-government organisations also. Haryali is a watershed development project sponsored by the Central Government which aims at enabling the rural populations to conserve water for drinking, irrigation, fisheries and afforestation. The Project is being executed by Gram Panchayats with people's participation. Neeru-Meeru (water and you) programme (in Andhra Pradesh) and Arvary Pani Sansad (in Alwar Rajasthan) have taken up constructions of various water-harvesting structures such as percolation tanks. Dug out ponds (Johand). Check dams. etc... through people's participation. Tamil Nadu has made water harvesting structures in the houses compulsory. No building can be constructed without making structures for water harvesting.

watershed development projects in some areas have been successful in rejuvenating environment and economy. However. There are only a few success stories. In majority of cases. The programme is still in its nascent stage. There is a need to generate awareness regarding benefits of watershed development and management among people in the country, and through this integrated water resource management approach water availability can be ensured on sustainable basis.

Out of which one is the success story of watershed management in India?

1. Ahmednagar, Maharashtra
2. Gandhi Nagar, Gujarat
3. Alwar, Rajasthan
4. Andhra Pradesh

Options :

485584133045. 1
485584133046. 2
485584133047. 3
485584133048. 4

Question Number : 198 Question Id : 48558433263 Question Type : MCQ Option Shuffling : No Is Question Mandatory : No Calculator : None Response Time : N.A Think Time : N.A Minimum Instruction Time : 0

Correct Marks : 5 Wrong Marks : 1

Question Key Details :

Key	Value
Comprehension	Comp2

Read the passage and answer 5 questions that follow:

Watershed management basically refers to efficient management and conservation of surface and groundwater resources. It involves prevention of runoff and shortage and recharge of groundwater through various methods like percolation tanks. Recharge wells. Etc. however. In broad sense watershed management includes conservation. Regeneration and judicious use of all resources- natural (like land water plants and animals) and human with in a watershed. Watershed management aims at bringing about balance between natural resources on the one hand and society on the other. The success of watershed development largely depends upon community participation.

The Central and State Government have initiated many watershed development and management programmes in the country. some of these are being implemented by non-government organisations also. Haryali is a watershed development project sponsored by the Central Government which aims at enabling the rural populations to conserve water for drinking, irrigation, fisheries and afforestation. The Project is being executed by Gram Panchayats with people's participation. Neeru-Meeru (water and you) programme (in Andhra Pradesh) and Arvary Pani Sansad (in Alwar Rajasthan) have taken up constructions of various water-harvesting structures such as percolation tanks. Dug out ponds (Johand). Check dams. etc... through people's participation. Tamil Nadu has made water harvesting structures in the houses compulsory. No building can be constructed without making structures for water harvesting.

watershed development projects in some areas have been successful in rejuvenating environment and economy. However. There are only a few success stories. In majority of cases. The programme is still in its nascent stage. There is a need to generate awareness regarding benefits of watershed development and management among people in the country, and through this integrated water resource management approach water availability can be ensured on sustainable basis.

Watershed Management largely depends upon the _____ .

1. Central and state Government
2. Community Participation
3. Management Programs
4. Development Projects

Options :

- 485584133049. 1
- 485584133050. 2
- 485584133051. 3
- 485584133052. 4

Question Number : 199 Question Id : 48558433264 Question Type : MCQ Option Shuffling : No Is Question Mandatory : No Calculator : None Response Time : N.A Think Time : N.A Minimum Instruction Time : 0

Correct Marks : 5 Wrong Marks : 1

Question Key Details :

Key	Value
Comprehension	Comp2

Read the passage and answer 5 questions that follow:

Watershed management basically refers to efficient management and conservation of surface and groundwater resources. It involves prevention of runoff and shortage and recharge of groundwater through various methods like percolation tanks. Recharge wells. Etc. however. In broad sense watershed management includes conservation. Regeneration and judicious use of all resources- natural (like land water plants and animals) and human with in a watershed. Watershed management aims at bringing about balance between natural resources on the one hand and society on the other. The success of watershed development largely depends upon community participation.

The Central and State Government have initiated many watershed development and management programmes in the country. some of these are being implemented by non-government organisations also. Haryali is a watershed development project sponsored by the Central Government which aims at enabling the rural populations to conserve water for drinking, irrigation, fisheries and afforestation. The Project is being executed by Gram Panchayats with people's participation. Neeru-Meeru (water and you) programme (in Andhra Pradesh) and Arvary Pani Sansad (in Alwar Rajasthan) have taken up constructions of various water-harvesting structures such as percolation tanks. Dug out ponds (Johand). Check dams. etc... through people's participation. Tamil Nadu has made water harvesting structures in the houses compulsory. No building can be constructed without making structures for water harvesting.

watershed development projects in some areas have been successful in rejuvenating environment and economy. However. There are only a few success stories. In majority of cases. The programme is still in its nascent stage. There is a need to generate awareness regarding benefits of watershed development and management among people in the country, and through this integrated water resource management approach water availability can be ensured on sustainable basis.

Which watershed development project is Sponsored by Central Government?

1. Arvary Pani Sansad
2. Compulsory water harvesting structures in all houses
3. Neeru-Meeru
4. Haryali

Options :

- 485584133053. 1
- 485584133054. 2
- 485584133055. 3
- 485584133056. 4

Question Number : 200 Question Id : 48558433265 Question Type : MCQ Option Shuffling : No Is Question Mandatory : No Calculator : None Response Time : N.A Think Time : N.A Minimum Instruction Time : 0

Correct Marks : 5 Wrong Marks : 1

Question Key Details :

Key	Value
Comprehension	Comp2

Read the passage and answer 5 questions that follow:

Watershed management basically refers to efficient management and conservation of surface and groundwater resources. It involves prevention of runoff and shortage and recharge of groundwater through various methods like percolation tanks. Recharge wells. Etc. however. In broad sense watershed management includes conservation. Regeneration and judicious use of all resources- natural (like land water plants and animals) and human with in a watershed. Watershed management aims at bringing about balance between natural resources on the one hand and society on the other. The success of watershed development largely depends upon community participation.

The Central and State Government have initiated many watershed development and management programmes in the country. some of these are being implemented by non-government organisations also. Haryali is a watershed development project sponsored by the Central Government which aims at enabling the rural populations to conserve water for drinking, irrigation, fisheries and afforestation. The Project is being executed by Gram Panchayats with people's participation. Neeru-Meeru (water and you) programme (in Andhra Pradesh) and Arvary Pani Sansad (in Alwar Rajasthan) have taken up constructions of various water-harvesting structures such as percolation tanks. Dug out ponds (Johand). Check dams. etc... through people's participation. Tamil Nadu has made water harvesting structures in the houses compulsory. No building can be constructed without making structures for water harvesting.

watershed development projects in some areas have been successful in rejuvenating environment and economy. However. There are only a few success stories. In majority of cases. The programme is still in its nascent stage. There is a need to generate awareness regarding benefits of watershed development and management among people in the country, and through this integrated water resource management approach water availability can be ensured on sustainable basis.

Which of the following watershed management programme was started in Rajasthan?

1. Arvary Pani Sansad
2. Neeru-Meeru
3. Haryali
4. Water harvesting

Options :

485584133057. 1
485584133058. 2
485584133059. 3
485584133060. 4

History

Group Number :	8
Group Id :	485584746
Group Maximum Duration :	45
Group Minimum Duration :	45
Show Attended Group? :	No
Edit Attended Group? :	No
Break time :	0
Group Marks :	200
Is this Group for Examiner? :	No

Examiner permission :
Show Progress Bar? :

Cant View
No

History

Section Id : 485584860
Section Number : 1
Section type : Online
Mandatory or Optional : Mandatory
Number of Questions : 50
Number of Questions to be attempted : 40
Section Marks : 200
Enable Mark as Answered Mark for Review and Clear Response : Yes
Maximum Instruction Time : 0
Sub-Section Number : 1
Sub-Section Id : 4855842428
Question Shuffling Allowed : Yes
Is Section Default? : null

Question Number : 201 Question Id : 48558433316 Question Type : MCQ Option Shuffling : No Is Question Mandatory :
No Calculator : None Response Time : N.A Think Time : N.A Minimum Instruction Time : 0
Correct Marks : 5 Wrong Marks : 1

Question Key Details :

Key	Value
Comprehension	MCQ

Who amongst the following was the engraver of Prabhavati Gupta's inscription?

1. Banabhatta
2. Chakradasa
3. Nagapiya
4. Sovanika

Options :

485584133261. 1
485584133262. 2
485584133263. 3
485584133264. 4

Question Number : 202 Question Id : 48558433317 Question Type : MCQ Option Shuffling : No Is Question Mandatory :
No Calculator : None Response Time : N.A Think Time : N.A Minimum Instruction Time : 0
Correct Marks : 5 Wrong Marks : 1

Question Key Details :

Key	Value
Comprehension	MCQ

How many 'Mahajanapadas' are there in total?

1. Fourteen
2. Six
3. Sixteen
4. Twelve

Options :

485584133265. 1
485584133266. 2
485584133267. 3
485584133268. 4

Question Number : 203 Question Id : 48558433318 Question Type : MCQ Option Shuffling : No Is Question Mandatory : No Calculator : None Response Time : N.A Think Time : N.A Minimum Instruction Time : 0

Correct Marks : 5 Wrong Marks : 1

Question Key Details :

Key	Value
Comprehension	MCQ

The Sangam texts mention categories of people living in the villages. Identify the categories:

- A. Masattuvan
- B. Setthis
- C. Uzhavar
- D. Adimai
- E. Vellalar

Choose the **correct** answer from the options given below:

1. A, B, C only
2. B, C, D only
3. C, D, E only
4. A, C, E only

Options :

485584133269. 1
485584133270. 2
485584133271. 3
485584133272. 4

Question Number : 204 Question Id : 48558433319 Question Type : MCQ Option Shuffling : No Is Question Mandatory : No Calculator : None Response Time : N.A Think Time : N.A Minimum Instruction Time : 0

Correct Marks : 5 Wrong Marks : 1

Question Key Details :

Key	Value
Comprehension	MCQ

Identify the writer of the play titled 'Mrichchhakatika'?

1. Vasistha
2. Shudraka
3. Gotama
4. Panini

Options :

485584133273. 1
485584133274. 2
485584133275. 3
485584133276. 4

Question Number : 205 Question Id : 48558433320 Question Type : MCQ Option Shuffling : No Is Question Mandatory : No Calculator : None Response Time : N.A Think Time : N.A Minimum Instruction Time : 0

Correct Marks : 5 Wrong Marks : 1

Question Key Details :

Key	Value
Comprehension	MCQ

Abdur Razzaq Samarqandi gave important description of which city?

1. Delhi
2. Vijayanagara
3. Sumtra
4. Magadha

Options :

485584133277. 1
485584133278. 2
485584133279. 3
485584133280. 4

Question Number : 206 Question Id : 48558433321 Question Type : MCQ Option Shuffling : No Is Question Mandatory : No Calculator : None Response Time : N.A Think Time : N.A Minimum Instruction Time : 0

Correct Marks : 5 Wrong Marks : 1

Question Key Details :

Key	Value
Comprehension	MCQ

From Malabar he went to Maldives, where he stayed for 10 months as qazi, but eventually decided to go to Sri Lanka. He took a ship to Sumatra and from there another ship to Chinese town Zaytun. He travelled extensively in China. Who was he?

1. Ibn Battuta
2. Al-Biruni
3. Bernier
4. Hiuen-Tsang

Options :

485584133281. 1
485584133282. 2
485584133283. 3
485584133284. 4

Question Number : 207 Question Id : 48558433322 Question Type : MCQ Option Shuffling : No Is Question Mandatory : No Calculator : None Response Time : N.A Think Time : N.A Minimum Instruction Time : 0

Correct Marks : 5 Wrong Marks : 1

Question Key Details :

Key	Value
Comprehension	MCQ

Mirabai, the best-known women poet of the bhakti tradition was Rajput princess from:-

1. Mewar
2. Marwar
3. Gujarat
4. Delhi

Options :

485584133285. 1
485584133286. 2
485584133287. 3
485584133288. 4

Question Number : 208 Question Id : 48558433323 Question Type : MCQ Option Shuffling : No Is Question Mandatory : No Calculator : None Response Time : N.A Think Time : N.A Minimum Instruction Time : 0

Correct Marks : 5 Wrong Marks : 1

Question Key Details :

Key	Value
Comprehension	MCQ

Which among the following religious teachers are associated with Punjab?

- A. Tukaram
- B. Ganj Bakhsh
- C. Miyan Mir
- D. Fariduddin Ganj-i-Shakar
- E. Raidas

Choose the **correct** answer from the options given below:

- 1. A, B, C only
- 2. B, C, D only
- 3. C, D, E only
- 4. A, C, E only

Options :

- 485584133289. 1
- 485584133290. 2
- 485584133291. 3
- 485584133292. 4

Question Number : 209 Question Id : 48558433324 Question Type : MCQ Option Shuffling : No Is Question Mandatory : No Calculator : None Response Time : N.A Think Time : N.A Minimum Instruction Time : 0

Correct Marks : 5 Wrong Marks : 1

Question Key Details :

Key	Value
Comprehension	MCQ

Match List I with List II:-

LIST I (Terms)		LIST II (Meaning)	
A.	Zimmi	I.	Tomb Shrine
B.	Jizya	II.	Protected
C.	Dargah	III.	Pilgrimage
D.	Ziyarat	IV.	A religious tax paid by Hindus

Choose the **correct** answer from the options given below:

- 1. A-I, B-II, C-IV, D-III
- 2. A-II, B-IV, C-III, D-I
- 3. A-IV, B-III, C-II, D-I
- 4. A-II, B-IV, C-I, D-III

Options :

- 485584133293. 1
- 485584133294. 2
- 485584133295. 3
- 485584133296. 4

Question Number : 210 Question Id : 48558433325 Question Type : MCQ Option Shuffling : No Is Question Mandatory : No Calculator : None Response Time : N.A Think Time : N.A Minimum Instruction Time : 0

Correct Marks : 5 Wrong Marks : 1

Question Key Details :

Key	Value
Comprehension	MCQ

Which of the following is considered as one of the most spectacular temple in the Vijayanagara Empire?

1. Vitthala Temple
2. Virupaksha Temple
3. Hazara Rama Temple
4. Brihadishvara Temple

Options :

- 485584133297. 1
- 485584133298. 2
- 485584133299. 3
- 485584133300. 4

Question Number : 211 Question Id : 48558433326 Question Type : MCQ Option Shuffling : No Is Question Mandatory : No Calculator : None Response Time : N.A Think Time : N.A Minimum Instruction Time : 0

Correct Marks : 5 Wrong Marks : 1

Question Key Details :

Key	Value
Comprehension	MCQ

In which year did Krishnadeva Raya defeat the sultan of Bijapur?

1. 1529
2. 1520
3. 1514
4. 1512

Options :

- 485584133301. 1
- 485584133302. 2
- 485584133303. 3
- 485584133304. 4

Question Number : 212 Question Id : 48558433327 Question Type : MCQ Option Shuffling : No Is Question Mandatory : No Calculator : None Response Time : N.A Think Time : N.A Minimum Instruction Time : 0

Correct Marks : 5 Wrong Marks : 1

Question Key Details :

Key	Value
Comprehension	MCQ

Arrange the establishment of the following kingdoms in a chronological order:

- A. Emergence of the Sultanates of Ahmadnagar, Bijapur and Berar
- B. Establishment of Bahmani Kingdom.
- C. Establishment of Vijayanagara Empire.
- D. Establishment of the Sultanate of Golconda.
- E. Conquest of Goa by the Portuguese

Choose the **correct** answer from the options given below:

- 1. D, E, A, B, C
- 2. B, C, D, E, A
- 3. A, B, C, D, E
- 4. C, B, A, E, D

Options :

- 485584133305. 1
- 485584133306. 2
- 485584133307. 3
- 485584133308. 4

Question Number : 213 Question Id : 48558433328 Question Type : MCQ Option Shuffling : No Is Question Mandatory : No Calculator : None Response Time : N.A Think Time : N.A Minimum Instruction Time : 0

Correct Marks : 5 Wrong Marks : 1

Question Key Details :

Key	Value
Comprehension	MCQ

From the statements given below, choose the **correct** ones about the fortifications and roads in Vijayanagara Empire.

- A. Paes, an ambassador from Persia, mentioned seven lines of forts.
- B. Razzaq said that cementing was used in the walls of the fort.
- C. There was no fortification around the agricultural fields.
- D. The fort was entered through well-guarded gates linking the city to the major road.
- E. The arch on the gateway led to the fortified settlement.

Choose the **correct** answer from the options given below:

- 1. E, A only
- 2. D, E only
- 3. C, D only
- 4. B, A only

Options :

- 485584133309. 1
- 485584133310. 2
- 485584133311. 3
- 485584133312. 4

Question Number : 214 Question Id : 48558433329 Question Type : MCQ Option Shuffling : No Is Question Mandatory : No Calculator : None Response Time : N.A Think Time : N.A Minimum Instruction Time : 0

Correct Marks : 5 Wrong Marks : 1

Question Key Details :

Key	Value
Comprehension	MCQ

Match List I with List II:-

LIST I (Foreign Traveler)		LIST II (Country)	
A.	Nicolo de Conti	I.	Russia
B.	Domingo Paes	II.	Persia
C.	Nikitin	III.	Italy
D.	Abdur Razzaq	IV.	Portugal

Choose the correct answer from the options given below:

1. A-III, B-IV, C-I, D-II
2. A-I, B-II, C-III, D-IV
3. A-IV, B-I, C-III, D-II
4. A-II, B-III, C-I, D-IV

Options :

- 485584133313. 1
- 485584133314. 2
- 485584133315. 3
- 485584133316. 4

Question Number : 215 Question Id : 48558433330 Question Type : MCQ Option Shuffling : No Is Question Mandatory : No Calculator : None Response Time : N.A Think Time : N.A Minimum Instruction Time : 0

Correct Marks : 5 Wrong Marks : 1

Question Key Details :

Key	Value
Comprehension	MCQ

Arrange these landmarks of the Mughal Empire in a chronological order.

- A. Reign of Akbar
- B. Reign of Humayun
- C. Reign of Shah Jahan
- D. Reign of Jahangir
- E. Reign of Aurangzeb

Choose the **correct** answer from the options given below:

- 1. A, B, C, D, E
- 2. B, A, D, C, E
- 3. E, D, B, C, A
- 4. B, C, A, D, E

Options :

- 485584133317. 1
- 485584133318. 2
- 485584133319. 3
- 485584133320. 4

Question Number : 216 Question Id : 48558433331 Question Type : MCQ Option Shuffling : No Is Question Mandatory : No Calculator : None Response Time : N.A Think Time : N.A Minimum Instruction Time : 0

Correct Marks : 5 Wrong Marks : 1

Question Key Details :

Key	Value
Comprehension	MCQ

In a painting titled "Jahangir's dream", the Mughal Emperor Jahangir is portrayed as embracing:-

- 1. Shah of Iraq
- 2. Abbasid Caliph
- 3. Shah of Iran
- 4. Safavid Shah Abbas

Options :

- 485584133321. 1
- 485584133322. 2
- 485584133323. 3
- 485584133324. 4

Question Number : 217 Question Id : 48558433332 Question Type : MCQ Option Shuffling : No Is Question Mandatory : No Calculator : None Response Time : N.A Think Time : N.A Minimum Instruction Time : 0

Correct Marks : 5 Wrong Marks : 1

Question Key Details :

Key	Value
Comprehension	MCQ

Akbar's quest for religious knowledge led to inter-faith debates in the Ibadat Khana at:-

1. Agra Fort
2. Red Fort of Shahjahanabad
3. Dargah of Nizamuddin Aulia
4. Fatehpur Sikri

Options :

485584133325. 1
485584133326. 2
485584133327. 3
485584133328. 4

Question Number : 218 Question Id : 48558433333 Question Type : MCQ Option Shuffling : No Is Question Mandatory : No Calculator : None Response Time : N.A Think Time : N.A Minimum Instruction Time : 0

Correct Marks : 5 Wrong Marks : 1

Question Key Details :

Key	Value
Comprehension	MCQ

Match List I with List II:-

LIST I		LIST II	
A.	Gulbadan Begum	I.	Alamgir Nama
B.	Abu'l Fzal	II.	Humayun Nama
C.	Muhammad Kazim	III.	Akbar Nama
D.	Abdul Hamid Lahori	IV.	Badshah Nama

Choose the **correct** answer from the options given below:

1. A-III, B-II, C-I, D-IV
2. A-I, B-II, C-IV, D-III
3. A-II, B-III, C-I, D-IV
4. A-IV, B-III, C-II, D-I

Options :

485584133329. 1
485584133330. 2
485584133331. 3
485584133332. 4

Question Number : 219 Question Id : 48558433334 Question Type : MCQ Option Shuffling : No Is Question Mandatory : No Calculator : None Response Time : N.A Think Time : N.A Minimum Instruction Time : 0

Correct Marks : 5 Wrong Marks : 1

Question Key Details :

Key	Value
Comprehension	MCQ

The areas under Ryotwari Settlements were surveyed after how many years?

1. 10 years
2. 20 years
3. 30 years
4. 40 years

Options :

- 485584133333. 1
- 485584133334. 2
- 485584133335. 3
- 485584133336. 4

Question Number : 220 Question Id : 48558433335 Question Type : MCQ Option Shuffling : No Is Question Mandatory : No Calculator : None Response Time : N.A Think Time : N.A Minimum Instruction Time : 0

Correct Marks : 5 Wrong Marks : 1

Question Key Details :

Key	Value
Comprehension	MCQ

Where was first British colonial rule established in India?

1. Madras Presidency
2. Bombay Presidency
3. Bengal Subah
4. Mysore State

Options :

- 485584133337. 1
- 485584133338. 2
- 485584133339. 3
- 485584133340. 4

Question Number : 221 Question Id : 48558433336 Question Type : MCQ Option Shuffling : No Is Question Mandatory : No Calculator : None Response Time : N.A Think Time : N.A Minimum Instruction Time : 0

Correct Marks : 5 Wrong Marks : 1

Question Key Details :

Key	Value
Comprehension	MCQ

The revenue system that was introduced in Bombay Deccan came to be known as:-

1. Permanent Settlement
2. Ryotwari Settlement
3. Mahalwari Settlement
4. Taluqudari Settlement

Options :

485584133341. 1
485584133342. 2
485584133343. 3
485584133344. 4

Question Number : 222 Question Id : 48558433337 Question Type : MCQ Option Shuffling : No Is Question Mandatory : No Calculator : None Response Time : N.A Think Time : N.A Minimum Instruction Time : 0

Correct Marks : 5 Wrong Marks : 1

Question Key Details :

Key	Value
Comprehension	MCQ

Which of the following are **correct** about Deccan riots?

- A. The movement began at Supa, a village in Poona.
- B. Supa was an inaccessible forest area with no markets.
- C. On 12 may 1875, ryots attacked the shopkeepers.
- D. Ryots set fire to the houses of British and protected the houses of Sahukars and moneylenders.
- E. Account books were not destroyed by the ryots rather preserved by them.

Choose the **correct** answer from the options given below:

1. D and E only
2. A and B only
3. A and C only
4. B and D only

Options :

485584133345. 1
485584133346. 2
485584133347. 3
485584133348. 4

Question Number : 223 Question Id : 48558433338 Question Type : MCQ Option Shuffling : No Is Question Mandatory : No Calculator : None Response Time : N.A Think Time : N.A Minimum Instruction Time : 0

Correct Marks : 5 Wrong Marks : 1

Question Key Details :

Key	Value
Comprehension	MCQ

Match List I with List II

LIST I		LIST II	
A.	British takeover of Deccan	I.	1757
B.	The British become rulers of Bengal	II.	1911
C.	Plague spreads to major cities	III.	1818
D.	Transfer of capital from Calcutta to Delhi	IV.	1896

Choose the **correct** answer from the options given below:

1. A-IV, B-III, C-II, D-I
2. A-I, B-II, C-III, D-IV
3. A-II, B-IV, C-I, D-III
4. A-III, B-I, C-IV, D-III

Options :

485584133349. 1
485584133350. 2
485584133351. 3
485584133352. 4

Question Number : 224 Question Id : 48558433339 Question Type : MCQ Option Shuffling : No Is Question Mandatory : No Calculator : None Response Time : N.A Think Time : N.A Minimum Instruction Time : 0

Correct Marks : 5 Wrong Marks : 1

Question Key Details :

Key	Value
Comprehension	MCQ

When was Awadh formally annexed by the British?

1. 1801
2. 1842
3. 1851
4. 1856

Options :

485584133353. 1
485584133354. 2
485584133355. 3
485584133356. 4

Question Number : 225 Question Id : 48558433340 Question Type : MCQ Option Shuffling : No Is Question Mandatory : No Calculator : None Response Time : N.A Think Time : N.A Minimum Instruction Time : 0

Correct Marks : 5 Wrong Marks : 1

Question Key Details :

Key	Value
Comprehension	MCQ

Who said, "A cherry that will drop into our mouth one day" in the context of Awadh?

1. Lord Dalhousie
2. Lord Wellesley
3. Lord Canning
4. Lord Curzon

Options :

485584133357. 1
485584133358. 2
485584133359. 3
485584133360. 4

Question Number : 226 Question Id : 48558433341 Question Type : MCQ Option Shuffling : No Is Question Mandatory : No Calculator : None Response Time : N.A Think Time : N.A Minimum Instruction Time : 0

Correct Marks : 5 Wrong Marks : 1

Question Key Details :

Key	Value
Comprehension	MCQ

Find out the name of the painter who painted "In Memoriam" From the option given below:

1. Thomas Jones Barker
2. Joseph Noel Paton
3. Miss Wheeler
4. Henry Lawrence

Options :

485584133361. 1
485584133362. 2
485584133363. 3
485584133364. 4

Question Number : 227 Question Id : 48558433342 Question Type : MCQ Option Shuffling : No Is Question Mandatory : No Calculator : None Response Time : N.A Think Time : N.A Minimum Instruction Time : 0

Correct Marks : 5 Wrong Marks : 1

Question Key Details :

Key	Value
Comprehension	MCQ

Under the leadership of which Governor General the custom of Sati was legally abolished?

1. Lord Curzon
2. Lord William Bentinck
3. Lord Dalhousie
4. Lord Wellesley

Options :

- 485584133365. 1
- 485584133366. 2
- 485584133367. 3
- 485584133368. 4

Question Number : 228 Question Id : 48558433343 Question Type : MCQ Option Shuffling : No Is Question Mandatory : No Calculator : None Response Time : N.A Think Time : N.A Minimum Instruction Time : 0

Correct Marks : 5 Wrong Marks : 1

Question Key Details :

Key	Value
Comprehension	MCQ

Arrange the following in chronological order according to their date of occurrence.

- A. Sepoy Mutiny in Meerut
- B. Summary settlement in Awadh
- C. Rising in Lucknow
- D. Rani of Jhansi killed in battle

Choose the **correct** answer from the options given below:

1. B, C, A, D
2. A, C, D, B
3. B, A, C, D
4. C, B, A, D

Options :

- 485584133369. 1
- 485584133370. 2
- 485584133371. 3
- 485584133372. 4

Question Number : 229 Question Id : 48558433344 Question Type : MCQ Option Shuffling : No Is Question Mandatory : No Calculator : None Response Time : N.A Think Time : N.A Minimum Instruction Time : 0

Correct Marks : 5 Wrong Marks : 1

Question Key Details :

Key	Value
Comprehension	MCQ

Arrange the following European trading companies in the chronological order in context of their settlement in India.

- A. Dutch
- B. British
- C. French
- D. Portuguese

Choose the **correct** answer from the options given below:

- 1. A, B, C, D
- 2. D, A, C, B
- 3. D, A, B, C
- 4. C, A, B, D

Options :

- 485584133373. 1
- 485584133374. 2
- 485584133375. 3
- 485584133376. 4

Question Number : 230 Question Id : 48558433345 Question Type : MCQ Option Shuffling : No Is Question Mandatory : No Calculator : None Response Time : N.A Think Time : N.A Minimum Instruction Time : 0

Correct Marks : 5 Wrong Marks : 1

Question Key Details :

Key	Value
Comprehension	MCQ

Which of the following statement is **incorrect**?

- 1. Lal, Bal and Pal were the leaders of Swadeshi Movement.
- 2. Extremist leaders are known for their moderate politics.
- 3. Moderates preferred gradual and persuasive approach.
- 4. Gopal Krishna Gokhale was a Moderate leader.

Options :

- 485584133377. 1
- 485584133378. 2
- 485584133379. 3
- 485584133380. 4

Question Number : 231 Question Id : 48558433346 Question Type : MCQ Option Shuffling : No Is Question Mandatory : No Calculator : None Response Time : N.A Think Time : N.A Minimum Instruction Time : 0

Correct Marks : 5 Wrong Marks : 1

Question Key Details :

Key	Value
Comprehension	MCQ

Through 'Salt March', Gandhi took the national movement to every household. This tactical wisdom was to bring larger participation of _____ in the freedom struggle.

1. Dalits
2. Menial workers
3. Peasants
4. Women

Options :

- 485584133381. 1
- 485584133382. 2
- 485584133383. 3
- 485584133384. 4

Question Number : 232 Question Id : 48558433347 Question Type : MCQ Option Shuffling : No Is Question Mandatory : No Calculator : None Response Time : N.A Think Time : N.A Minimum Instruction Time : 0

Correct Marks : 5 Wrong Marks : 1

Question Key Details :

Key	Value
Comprehension	MCQ

In which year did Gandhi left British India for South Africa as a lawyer?

1. 1881
2. 1893
3. 1894
4. 1915

Options :

- 485584133385. 1
- 485584133386. 2
- 485584133387. 3
- 485584133388. 4

Question Number : 233 Question Id : 48558433348 Question Type : MCQ Option Shuffling : No Is Question Mandatory : No Calculator : None Response Time : N.A Think Time : N.A Minimum Instruction Time : 0

Correct Marks : 5 Wrong Marks : 1

Question Key Details :

Key	Value
Comprehension	MCQ

Due to which event the British instituted 'censorship of the press' and detention without trial. It was later known as the Rowlatt Act?

1. The Great Depression
2. World War I
3. World War II
4. Balkan Wars

Options :

- 485584133389. 1
- 485584133390. 2
- 485584133391. 3
- 485584133392. 4

Question Number : 234 Question Id : 48558433349 Question Type : MCQ Option Shuffling : No Is Question Mandatory : No Calculator : None Response Time : N.A Think Time : N.A Minimum Instruction Time : 0

Correct Marks : 5 Wrong Marks : 1

Question Key Details :

Key	Value
Comprehension	MCQ

Match List I with List II

LIST I (Non-Cooperation Social Groups)		LIST II (Participation in Non-Cooperation)	
A.	The working class	I.	Refused to carry loads for colonial officers
B.	Hill tribes in northern Andhra	II.	Did not pay taxes
C.	Peasants in Kumaun	III.	Violated the forest laws
D.	Farmers in Awadh	IV.	Strike

Choose the correct answer from the options given below:

1. A-IV, B-III, C-I, D-II
2. A-I, B-III, C-II, D-IV
3. A-I, B-II, C-III, D-IV
4. A-IV, B-I, C-III, D-II

Options :

- 485584133393. 1
- 485584133394. 2
- 485584133395. 3
- 485584133396. 4

Question Number : 235 Question Id : 48558433350 Question Type : MCQ Option Shuffling : No Is Question Mandatory : No Calculator : None Response Time : N.A Think Time : N.A Minimum Instruction Time : 0

Correct Marks : 5 Wrong Marks : 1

Question Key Details :

Key	Value
-----	-------

Arrange the following in a chronological order.

- A. Resolution at Lahore, demanding a measure of autonomy for the Muslim-majority areas.
- B. Violence breaks out between Hindus and Muslims in Calcutta.
- C. The name Pakistan is coined by a Punjabi Muslim student at Cambridge, Choudhary Rehmat Ali.
- D. The Muslim League declares "Direct Action" for winning Pakistan.
- E. Mohammad Iqbal speaks of the need for an autonomous North West Indian Muslim state.

Choose the **correct** answer from the options given below:

1. A, C, E, B, D
2. C, E, B, D, A
3. E, C, A, D, B
4. B, C, D, A, E

Options :

485584133397. 1
 485584133398. 2
 485584133399. 3
 485584133400. 4

Question Number : 236 Question Id : 48558433351 Question Type : MCQ Option Shuffling : No Is Question Mandatory : No Calculator : None Response Time : N.A Think Time : N.A Minimum Instruction Time : 0

Correct Marks : 5 Wrong Marks : 1

Question Key Details :

Key	Value
Comprehension	MCQ

"The British element is gone, but they have left the mischief behind" Who said this against the separate electorates?

1. Jawaharlal Nehru
2. Vallabhbhai Patel
3. B. Pocker Bahadur
4. R. V. Dhulekar

Options :

485584133401. 1
 485584133402. 2
 485584133403. 3
 485584133404. 4

Question Number : 237 Question Id : 48558433352 Question Type : MCQ Option Shuffling : No Is Question Mandatory : No Calculator : None Response Time : N.A Think Time : N.A Minimum Instruction Time : 0

Correct Marks : 5 Wrong Marks : 1

Question Key Details :

Key	Value
-----	-------

Comprehension	MCQ
---------------	-----

Which of the following language was proposed by Mahatma Gandhi as the national language as it could be spoken by the common people?

1. Arabic
2. Sanskrit
3. Hindustani
4. Persian

Options :

485584133405. 1
485584133406. 2
485584133407. 3
485584133408. 4

Question Number : 238 Question Id : 48558433353 Question Type : MCQ Option Shuffling : No Is Question Mandatory : No Calculator : None Response Time : N.A Think Time : N.A Minimum Instruction Time : 0

Correct Marks : 5 Wrong Marks : 1

Question Key Details :

Key	Value
Comprehension	MCQ

Which articles provide the Fundamental Rights of "Cultural and Education Rights"

1. Articles 25-26
2. Articles 27-28
3. Articles 29-30
4. Articles 14-16

Options :

485584133409. 1
485584133410. 2
485584133411. 3
485584133412. 4

Question Number : 239 Question Id : 48558433354 Question Type : MCQ Option Shuffling : No Is Question Mandatory : No Calculator : None Response Time : N.A Think Time : N.A Minimum Instruction Time : 0

Correct Marks : 5 Wrong Marks : 1

Question Key Details :

Key	Value
Comprehension	MCQ

Who said that separate electorate is a "Poison that has entered the body politics of our country"?

1. S. N. Mukherjee
2. Vallabhbhai Patel
3. Rajendra Prasad
4. Jawaharlal Nehru

Options :

485584133413. 1
485584133414. 2
485584133415. 3
485584133416. 4

Question Number : 240 Question Id : 48558433355 Question Type : MCQ Option Shuffling : No Is Question Mandatory : No Calculator : None Response Time : N.A Think Time : N.A Minimum Instruction Time : 0

Correct Marks : 5 Wrong Marks : 1

Question Key Details :

Key	Value
Comprehension	MCQ

Arrange the following in a chronological order.

- A. Labour Government comes to Power in Britain.
- B. Cabinet Mission's Announcement.
- C. Muslim League announces Direct Action Day.
- D. General Election of India.

Choose the **correct** answer from the options given below:

1. A, B, C, D
2. A, D, B, C
3. C, A, B, D
4. B, A, C, D

Options :

485584133417. 1
485584133418. 2
485584133419. 3
485584133420. 4

Sub-Section Number : 2
Sub-Section Id : 4855842429
Question Shuffling Allowed : No
Is Section Default? : null

Question Number : 241 Question Id : 48558433356 Question Type : MCQ Option Shuffling : No Is Question Mandatory : No Calculator : None Response Time : N.A Think Time : N.A Minimum Instruction Time : 0

Correct Marks : 5 Wrong Marks : 1

Question Key Details :

Key	Value
Comprehension	Compl

Read the passage and answer the questions:

Mesopotamian texts datable to the third millennium BCE refer to copper coming from a region called Magan. Interestingly enough copper found at Mesopotamian sites also contains traces of nickel. Other archaeological finds suggestive of long-distance contacts include Harappan seals, weights, dice and beads. Mesopotamian texts mention contact with regions named Dilmun, Magan and Meluhha. They mention the products from Meluhha: Carnelian, lapis lazuli, copper, gold, and varieties of wood. A Mesopotamian myth says of Meluhha: "May your bird be the haja-bird, may its call be heard in the royal palace."

"Meluhha" in the Mesopotamian texts refers to:-

1. Oman
2. Bahrain
3. Iran
4. Harappa

Options :

485584133421. 1
485584133422. 2
485584133423. 3
485584133424. 4

Question Number : 242 Question Id : 48558433357 Question Type : MCQ Option Shuffling : No Is Question Mandatory : No Calculator : None Response Time : N.A Think Time : N.A Minimum Instruction Time : 0

Correct Marks : 5 Wrong Marks : 1

Question Key Details :

Key	Value
Comprehension	Compl

Read the passage and answer the questions:

Mesopotamian texts datable to the third millennium BCE refer to copper coming from a region called Magan. Interestingly enough copper found at Mesopotamian sites also contains traces of nickel. Other archaeological finds suggestive of long-distance contacts include Harappan seals, weights, dice and beads. Mesopotamian texts mention contact with regions named Dilmun, Magan and Meluhha. They mention the products from Meluhha: Carnelian, lapis lazuli, copper, gold, and varieties of wood. A Mesopotamian myth says of Meluhha: "May your bird be the haja-bird, may its call be heard in the royal palace."

According to some archaeologists, the haja-bird mentioned in the Mesopotamian texts was:-

1. Peacock
2. Eagle
3. Koel
4. Sparrow

Options :

485584133425. 1
485584133426. 2
485584133427. 3
485584133428. 4

Question Number : 243 Question Id : 48558433358 Question Type : MCQ Option Shuffling : No Is Question Mandatory : No Calculator : None Response Time : N.A Think Time : N.A Minimum Instruction Time : 0

Correct Marks : 5 Wrong Marks : 1

Question Key Details :

Key	Value
Comprehension	Comp1

Read the passage and answer the questions:

Mesopotamian texts datable to the third millennium BCE refer to copper coming from a region called Magan. Interestingly enough copper found at Mesopotamian sites also contains traces of nickel. Other archaeological finds suggestive of long-distance contacts include Harappan seals, weights, dice and beads. Mesopotamian texts mention contact with regions named Dilmun, Magan and Meluhha. They mention the products from Meluhha: Carnelian, lapis lazuli, copper, gold, and varieties of wood. A Mesopotamian myth says of Meluhha: "May your bird be the haja-bird, may its call be heard in the royal palace."

What was the Harappan seal made of?

1. Chert
2. Carnelian
3. Steatite
4. Lapis Lazuli

Options :

485584133429. 1
485584133430. 2
485584133431. 3
485584133432. 4

Question Number : 244 Question Id : 48558433359 Question Type : MCQ Option Shuffling : No Is Question Mandatory : No Calculator : None Response Time : N.A Think Time : N.A Minimum Instruction Time : 0

Correct Marks : 5 Wrong Marks : 1

Question Key Details :

Key	Value
-----	-------

Read the passage and answer the questions:

Mesopotamian texts datable to the third millennium BCE refer to copper coming from a region called Magan. Interestingly enough copper found at Mesopotamian sites also contains traces of nickel. Other archaeological finds suggestive of long-distance contacts include Harappan seals, weights, dice and beads. Mesopotamian texts mention contact with regions named Dilmun, Magan and Meluhha. They mention the products from Meluhha: Carnelian, lapis lazuli, copper, gold, and varieties of wood. A Mesopotamian myth says of Meluhha: "May your bird be the haja-bird, may its call be heard in the royal palace."

Specialised drills have been found at which of the following Harappan sites?

- A. Nageshwar
- B. Dholavira
- C. Lothal
- D. Balakot
- E. Chanhudaro

Choose the **correct** answer from the options given below:

- 1. C, D, E only
- 2. B, C, E only
- 3. A, B, D only
- 4. A, B, C only

Options :

- 485584133433. 1
- 485584133434. 2
- 485584133435. 3
- 485584133436. 4

Question Number : 245 Question Id : 48558433360 Question Type : MCQ Option Shuffling : No Is Question Mandatory : No Calculator : None Response Time : N.A Think Time : N.A Minimum Instruction Time : 0

Correct Marks : 5 Wrong Marks : 1

Question Key Details :

Key	Value
Comprehension	Compl

Read the passage and answer the questions:

Mesopotamian texts datable to the third millennium BCE refer to copper coming from a region called Magan. Interestingly enough copper found at Mesopotamian sites also contains traces of nickel. Other archaeological finds suggestive of long-distance contacts include Harappan seals, weights, dice and beads. Mesopotamian texts mention contact with regions named Dilmun, Magan and Meluhha. They mention the products from Meluhha: Carnelian, lapis lazuli, copper, gold, and varieties of wood. A Mesopotamian myth says of Meluhha: "May your bird be the haja-bird, may its call be heard in the royal palace."

Match List I with List II:-

LIST I		LIST II	
A.	Nageshwar	I.	Lapis Lazuli
B.	Shortughai	II.	Copper
C.	Lothal	III.	Shells
D.	Khetri	IV.	Carnelian

Choose the **correct** answer from the options given below:

1. A-IV, B-II, C-III, D-I
2. A-II, B-IV, C-I, D-III
3. A-III, B-I, C-IV, D-II
4. A-I, B-III, C-II, D-IV

Options :

485584133437. 1
485584133438. 2
485584133439. 3
485584133440. 4

Sub-Section Number :

3

Sub-Section Id :

4855842430

Question Shuffling Allowed :

No

Is Section Default? :

null

Question Number : 246 Question Id : 48558433361 Question Type : MCQ Option Shuffling : No Is Question Mandatory : No Calculator : None Response Time : N.A Think Time : N.A Minimum Instruction Time : 0

Correct Marks : 5 Wrong Marks : 1

Question Key Details :

Key	Value
Comprehension	Comp2

Read the passage and answer following five questions:

Here are verses from the Rigveda invoking Agni, the god of fire, often identified with the sacrificial fire, into which offerings were made so as to reach the other deities. "Bring, O strong one, this sacrifice of ours to the gods, O wise one, as a liberal giver. Bestow on us, O priest, abundant food. Agni, obtain, by sacrificing, mighty wealth for us". Verses such as these were composed in a special kind of Sanskrit, known as Vedic Sanskrit. They were taught orally to men belonging to priestly families.

The 'Rigveda' consists of _____ in praise of a variety of deities

1. Stories
2. Plays
3. Scripts
4. Hymns

Options :

485584133441. 1
485584133442. 2
485584133443. 3
485584133444. 4

Question Number : 247 Question Id : 48558433362 Question Type : MCQ Option Shuffling : No Is Question Mandatory : No Calculator : None Response Time : N.A Think Time : N.A Minimum Instruction Time : 0

Correct Marks : 5 Wrong Marks : 1

Question Key Details :

Key	Value
Comprehension	Comp2

Read the passage and answer following five questions:

Here are verses from the Rigveda invoking Agni, the god of fire, often identified with the sacrificial fire, into which offerings were made so as to reach the other deities. "Bring, O strong one, this sacrifice of ours to the gods, O wise one, as a liberal giver. Bestow on us, O priest, abundant food. Agni, obtain, by sacrificing, mighty wealth for us". Verses such as these were composed in a special kind of Sanskrit, known as Vedic Sanskrit. They were taught orally to men belonging to priestly families.

Identify among the following another deity widely mentioned in the Rigveda.

1. Shiva
2. Indra
3. Vishnu
4. Krishna

Options :

485584133445. 1
485584133446. 2
485584133447. 3
485584133448. 4

Question Number : 248 Question Id : 48558433363 Question Type : MCQ Option Shuffling : No Is Question Mandatory : No Calculator : None Response Time : N.A Think Time : N.A Minimum Instruction Time : 0

Correct Marks : 5 Wrong Marks : 1

Question Key Details :

Key	Value
Comprehension	Comp2

Read the passage and answer following five questions:

Here are verses from the Rigveda invoking Agni, the god of fire, often identified with the sacrificial fire, into which offerings were made so as to reach the other deities. "Bring, O strong one, this sacrifice of ours to the gods, O wise one, as a liberal giver. Bestow on us, O priest, abundant food. Agni, obtain, by sacrificing, mighty wealth for us". Verses such as these were composed in a special kind of Sanskrit, known as Vedic Sanskrit. They were taught orally to men belonging to priestly families.

Identify the timeline of Rigveda compilation.

1. C.1500 and 1000 BCE
2. C.1200 and 1000 BCE
3. C.1100 and 1200 BCE
4. C.1000 and 1500 BCE

Options :

485584133449. 1
485584133450. 2
485584133451. 3
485584133452. 4

Question Number : 249 Question Id : 48558433364 Question Type : MCQ Option Shuffling : No Is Question Mandatory : No Calculator : None Response Time : N.A Think Time : N.A Minimum Instruction Time : 0

Correct Marks : 5 Wrong Marks : 1

Question Key Details :

Key	Value
Comprehension	Comp2

Read the passage and answer following five questions:

Here are verses from the Rigveda invoking Agni, the god of fire, often identified with the sacrificial fire, into which offerings were made so as to reach the other deities. "Bring, O strong one, this sacrifice of ours to the gods, O wise one, as a liberal giver. Bestow on us, O priest, abundant food. Agni, obtain, by sacrificing, mighty wealth for us". Verses such as these were composed in a special kind of Sanskrit, known as Vedic Sanskrit. They were taught orally to men belonging to priestly families.

Which language was used to compose texts like Rigveda and Upanishads?

1. Hindavi
2. Pali
3. Sanskrit
4. Prakrit

Options :

485584133453. 1
485584133454. 2
485584133455. 3
485584133456. 4

Question Number : 250 Question Id : 48558433365 Question Type : MCQ Option Shuffling : No Is Question Mandatory : No Calculator : None Response Time : N.A Think Time : N.A Minimum Instruction Time : 0

Correct Marks : 5 Wrong Marks : 1

Question Key Details :

Key	Value
Comprehension	Comp2

Read the passage and answer following five questions:

Here are verses from the Rigveda invoking Agni, the god of fire, often identified with the sacrificial fire, into which offerings were made so as to reach the other deities. "Bring, O strong one, this sacrifice of ours to the gods, O wise one, as a liberal giver. Bestow on us, O priest, abundant food. Agni, obtain, by sacrificing, mighty wealth for us". Verses such as these were composed in a special kind of Sanskrit, known as Vedic Sanskrit. They were taught orally to men belonging to priestly families.

Identify the 'sacrifices' mentioned in Rigveda.

- A. Samsara
- B. Rajasuya
- C. Kutagarashala
- D. Soma
- E. Ashvamedha

Choose the **correct** answer from the options given below:

- 1. A, B only
- 2. B, D only
- 3. B, E only
- 4. C, E only

Options :

- 485584133457. 1
- 485584133458. 2
- 485584133459. 3
- 485584133460. 4

Legal Studies

Group Number :	9
Group Id :	485584747
Group Maximum Duration :	45
Group Minimum Duration :	45
Show Attended Group? :	No
Edit Attended Group? :	No
Break time :	0
Group Marks :	200
Is this Group for Examiner? :	No
Examiner permission :	Cant View
Show Progress Bar? :	No

Legal Studies

Section Id :	485584861
Section Number :	1
Section type :	Online

Mandatory or Optional :	Mandatory
Number of Questions :	50
Number of Questions to be attempted :	40
Section Marks :	200
Enable Mark as Answered Mark for Review and Clear Response :	Yes
Maximum Instruction Time :	0
Sub-Section Number :	1
Sub-Section Id :	4855842431
Question Shuffling Allowed :	Yes
Is Section Default? :	null

Question Number : 251 Question Id : 48558433836 Question Type : MCQ Option Shuffling : No Is Question Mandatory : No Calculator : None Response Time : N.A Think Time : N.A Minimum Instruction Time : 0

Correct Marks : 5 Wrong Marks : 1

Question Key Details :

Key	Value
Comprehension	MCQ

India's first Attorney General was

1. M.C. Setalvad
2. Justice P. Sathasivam
3. Justice V. Ramaswamy
4. Mukul Rohtagi

Options :

485584135341. 1
485584135342. 2
485584135343. 3
485584135344. 4

Question Number : 252 Question Id : 48558433837 Question Type : MCQ Option Shuffling : No Is Question Mandatory : No Calculator : None Response Time : N.A Think Time : N.A Minimum Instruction Time : 0

Correct Marks : 5 Wrong Marks : 1

Question Key Details :

Key	Value
Comprehension	MCQ

What is enshrined in Article 217 of the Indian Constitution?

1. The procedure for appointment of judges of Supreme Court
2. The procedure for appointment of judges of High Court
3. The procedure for appointment of judges of lower Judiciary
4. The procedure of removal of Judges

Options :

485584135345. 1
485584135346. 2
485584135347. 3

485584135348. 4

Question Number : 253 Question Id : 48558433838 Question Type : MCQ Option Shuffling : No Is Question Mandatory : No Calculator : None Response Time : N.A Think Time : N.A Minimum Instruction Time : 0

Correct Marks : 5 Wrong Marks : 1

Question Key Details :

Key	Value
Comprehension	MCQ

The doctrine of *Locus Standi* means

1. Right to respect the court
2. Right to appear before the court
3. Right to stand with the court
4. Right to seek Justice

Options :

- 485584135349. 1
- 485584135350. 2
- 485584135351. 3
- 485584135352. 4

Question Number : 254 Question Id : 48558433839 Question Type : MCQ Option Shuffling : No Is Question Mandatory : No Calculator : None Response Time : N.A Think Time : N.A Minimum Instruction Time : 0

Correct Marks : 5 Wrong Marks : 1

Question Key Details :

Key	Value
Comprehension	MCQ

Which Article of the Constitution of India says that the advisory jurisdiction of Supreme Court can be sought by President of India?

1. Article 140
2. Article 141
3. Article 142
4. Article 143

Options :

- 485584135353. 1
- 485584135354. 2
- 485584135355. 3
- 485584135356. 4

Question Number : 255 Question Id : 48558433840 Question Type : MCQ Option Shuffling : No Is Question Mandatory : No Calculator : None Response Time : N.A Think Time : N.A Minimum Instruction Time : 0

Correct Marks : 5 Wrong Marks : 1

Question Key Details :

Key	Value
Comprehension	MCQ

With respect to separation of power, which of the following are true?

- A. It requires non-Harmonious relation between the legislative, Executive and Judiciary
- B. Federal Government has law making powers different than that of states or provinces
- C. It allows for liberty as it avoids concentration of powers in one branch.
- D. It promotes efficiency
- E. It facilitates checks and balances of each branch in state.

Choose the correct answer from the options given below:

- 1. B, C, D, E only
- 2. B, C, D only
- 3. C, D, E only
- 4. A, C, B only

Options :

- 485584135357. 1
- 485584135358. 2
- 485584135359. 3
- 485584135360. 4

Question Number : 256 Question Id : 48558433841 Question Type : MCQ Option Shuffling : No Is Question Mandatory : No Calculator : None Response Time : N.A Think Time : N.A Minimum Instruction Time : 0

Correct Marks : 5 Wrong Marks : 1

Question Key Details :

Key	Value
Comprehension	MCQ

Arrange the courts of civil Judges in a district in ascending order.

- A. First class Judicial Magistrate court
- B. Second Class Judicial Magistrate court
- C. Munsiff Courts
- D. Chief Judicial Magistrate Court

Choose the correct answer from the options given below:

- 1. B, D, A, C
- 2. C, B, A, D
- 3. A, B, C, D
- 4. D, A, C, B

Options :

- 485584135361. 1
- 485584135362. 2
- 485584135363. 3
- 485584135364. 4

Question Number : 257 Question Id : 48558433842 Question Type : MCQ Option Shuffling : No Is Question Mandatory : No Calculator : None Response Time : N.A Think Time : N.A Minimum Instruction Time : 0

Correct Marks : 5 Wrong Marks : 1

Question Key Details :

Key	Value
Comprehension	MCQ

Arrange the stages of investigations initiated by police officer for the collection of evidence in order of their occurrence:

- A. Collection of evidence
- B. Ascertaining facts and circumstances
- C. Proceeding to spot
- D. Discovery and arrest of suspected offender
- E. Investigation ends in police report to magistrate

Choose the correct answer from the options given below:

- 1. C, D, B, A,E
- 2. C, B, D, A, E
- 3. B, E, A, C, D
- 4. A, B, C, D, E

Options :

- 485584135365. 1
- 485584135366. 2
- 485584135367. 3
- 485584135368. 4

Question Number : 258 Question Id : 48558433843 Question Type : MCQ Option Shuffling : No Is Question Mandatory : No Calculator : None Response Time : N.A Think Time : N.A Minimum Instruction Time : 0

Correct Marks : 5 Wrong Marks : 1

Question Key Details :

Key	Value
Comprehension	MCQ

A women in sheer destitute and impoverishment attempted to kill herself after failing in all ways to arrange for food for her starving children. She did it knowingly therefore she will be held guilty by the Court because:

- 1. the act was done under compulsion
- 2. the act was done out of necessity
- 3. the act was done due to insanity
- 4. the act was done intentionally

Options :

- 485584135369. 1
- 485584135370. 2
- 485584135371. 3
- 485584135372. 4

Question Number : 259 Question Id : 48558433844 Question Type : MCQ Option Shuffling : No Is Question Mandatory : No Calculator : None Response Time : N.A Think Time : N.A Minimum Instruction Time : 0

Correct Marks : 5 Wrong Marks : 1

Question Key Details :

Key	Value
Comprehension	MCQ

Crime committed by structured groups typically involving the distribution of illegal goods and services to others is known as-

1. White Collar crime
2. Crime against groups
3. Organised Crimes
4. Gang War

Options :

- 485584135373. 1
- 485584135374. 2
- 485584135375. 3
- 485584135376. 4

Question Number : 260 Question Id : 48558433845 Question Type : MCQ Option Shuffling : No Is Question Mandatory : No Calculator : None Response Time : N.A Think Time : N.A Minimum Instruction Time : 0

Correct Marks : 5 Wrong Marks : 1

Question Key Details :

Key	Value
Comprehension	MCQ

If the intention is to reap fruits from the trees, the trees would be considered

1. Immovable property
2. Movable property
3. General property
4. Intangible property

Options :

- 485584135377. 1
- 485584135378. 2
- 485584135379. 3
- 485584135380. 4

Question Number : 261 Question Id : 48558433846 Question Type : MCQ Option Shuffling : No Is Question Mandatory : No Calculator : None Response Time : N.A Think Time : N.A Minimum Instruction Time : 0

Correct Marks : 5 Wrong Marks : 1

Question Key Details :

Key	Value
Comprehension	MCQ

A sells his garden as well as house through the instrument to B. whereas B, wants to retain only the house and wants to cancel the garden. B has to retain the garden if he wants the house or cancel the whole transaction.' Which of the following doctrine is applicable in this instance

1. Doctrine of lis Pendens
2. Doctrine of Suitability
3. Doctrine of Election
4. Doctrine of Exchange

Options :

- 485584135381. 1
- 485584135382. 2
- 485584135383. 3
- 485584135384. 4

Question Number : 262 Question Id : 48558433847 Question Type : MCQ Option Shuffling : No Is Question Mandatory : No Calculator : None Response Time : N.A Think Time : N.A Minimum Instruction Time : 0

Correct Marks : 5 Wrong Marks : 1

Question Key Details :

Key	Value
Comprehension	MCQ

In what kind of transfer of property, the right and liabilities of the parties to exchange shall be that of the rights and liabilities of the buyer to the extent of receiving and that of the seller to the extent of giving.

1. Gift
2. Lease
3. Exchange
4. Mortgage

Options :

- 485584135385. 1
- 485584135386. 2
- 485584135387. 3
- 485584135388. 4

Question Number : 263 Question Id : 48558433848 Question Type : MCQ Option Shuffling : No Is Question Mandatory : No Calculator : None Response Time : N.A Think Time : N.A Minimum Instruction Time : 0

Correct Marks : 5 Wrong Marks : 1

Question Key Details :

Key	Value
Comprehension	MCQ

Match List I with List II

LIST I		LIST II	
A.	False Imprisonment	I.	act of deliberate physical harm to victim
B.	Unlawful harassment	II.	claimant to be knowingly confined
C.	Tresspass to Chattels	III.	invade real property without claimants approval
D.	Tresspass to land	IV.	intermeddle with a chattel which was in the possession of claimant

Choose the correct answer from the options given below:

1. A-I, B-IV, C-II, D-III
2. A-II, B-I, C-IV, D-III
3. A-III, B-II, C-I, D-IV
4. A-IV, B-III, C-I, D-II

Options :

485584135389. 1
485584135390. 2
485584135391. 3
485584135392. 4

Question Number : 264 Question Id : 48558433849 Question Type : MCQ Option Shuffling : No Is Question Mandatory : No Calculator : None Response Time : N.A Think Time : N.A Minimum Instruction Time : 0

Correct Marks : 5 Wrong Marks : 1

Question Key Details :

Key	Value
Comprehension	MCQ

The principle of "Duty of Care" is explained in which case:-

1. Donoghue v. Stevenson
2. Rylands v. Fletcher
3. Ashby v. White
4. M.C. Mehta v. Union of India

Options :

485584135393. 1
485584135394. 2
485584135395. 3
485584135396. 4

Question Number : 265 Question Id : 48558433850 Question Type : MCQ Option Shuffling : No Is Question Mandatory : No Calculator : None Response Time : N.A Think Time : N.A Minimum Instruction Time : 0

Correct Marks : 5 Wrong Marks : 1

Question Key Details :

Key	Value
Comprehension	MCQ

A contract without consideration is

1. valid
2. Void
3. Voidable
4. Void ab initio

Options :

485584135397. 1
485584135398. 2
485584135399. 3
485584135400. 4

Question Number : 266 Question Id : 48558433851 Question Type : MCQ Option Shuffling : No Is Question Mandatory : No Calculator : None Response Time : N.A Think Time : N.A Minimum Instruction Time : 0

Correct Marks : 5 Wrong Marks : 1

Question Key Details :

Key	Value
Comprehension	MCQ

A contract can be enforced before the court only if it creates legal obligation among the parties. In light of the statement choose the correct answer:

- A. An agreement entered into with a minor is enforceable in exceptional circumstance
- B. An agreement entered between husband and wife cannot be enforced in the court
- C. An agreement with inadequate consideration is a voidable agreement
- D. A promise without consideration can create a valid contract
- E. An agreement with an intoxicated person cannot be called as contract

Choose the correct answer from the options given below:

1. A, B, D only
2. B and E only
3. C, D and E only
4. A, C and D only

Options :

485584135401. 1
485584135402. 2
485584135403. 3
485584135404. 4

Question Number : 267 Question Id : 48558433852 Question Type : MCQ Option Shuffling : No Is Question Mandatory : No Calculator : None Response Time : N.A Think Time : N.A Minimum Instruction Time : 0

Correct Marks : 5 Wrong Marks : 1

Question Key Details :

Key	Value
Comprehension	MCQ

Match List I with List II

LIST I		LIST II	
A.	Novation	I.	Terms of contract of modified
B.	Rescission	II.	New contract is substituted for an old contract
C.	Waiver	III.	Certain or all terms of contract are cancelled
D.	Alteration	IV.	Parties to a contract abandon their mutual rights

Choose the correct answer from the options given below:

1. A-II, B-III, C-IV, D-I
2. A-II, B-I, C-III, D-IV
3. A-I, B-III, C-IV, D-II
4. A-III, B-II, C-IV, D-I

Options :

485584135405. 1
485584135406. 2
485584135407. 3
485584135408. 4

Question Number : 268 Question Id : 48558433853 Question Type : MCQ Option Shuffling : No Is Question Mandatory : No Calculator : None Response Time : N.A Think Time : N.A Minimum Instruction Time : 0

Correct Marks : 5 Wrong Marks : 1

Question Key Details :

Key	Value
Comprehension	MCQ

'A' agrees to supply 200 liters of oil to 'B' on 1st February 2023. The contract was entered between the two on 15th January 2023. On 31st January 2023, 'A' informed 'B' that the consignment has been dispatched and would reach 'B' on scheduled date. On 1st Feb 2023, 'B' refused to accept the oil as he did not have sufficient space to store the oil.

What is the remedy available with 'A'?

1. No remedy as the contract is discharged by impossibility of performance
2. No remedy is available as 'A' will get back his goods, so has not suffered any loss
3. 'A' is entitled to receive compensation from 'B' for breach of contract
4. 'A' can wait till 'B' arrange for warehouse

Options :

485584135409. 1
485584135410. 2
485584135411. 3

Question Number : 269 Question Id : 48558433854 Question Type : MCQ Option Shuffling : No Is Question Mandatory : No Calculator : None Response Time : N.A Think Time : N.A Minimum Instruction Time : 0

Correct Marks : 5 Wrong Marks : 1

Question Key Details :

Key	Value
Comprehension	MCQ

Which of the given statements is NOT correct for the Tribunals as a dispute resolution institution?

1. The 42nd Amendment Act empowered the Parliament to set up tribunals for adjudication of specialised disputes
2. The tribunals are meant to replace the courts as the courts are over burdened with pendency of cases.
3. The decisions of the tribunals could be scrutinised by the division of High Courts
4. Regulations oversee the law and order compliance by the tribunals in the relevant government sector.

Options :

- 485584135413. 1
- 485584135414. 2
- 485584135415. 3
- 485584135416. 4

Question Number : 270 Question Id : 48558433855 Question Type : MCQ Option Shuffling : No Is Question Mandatory : No Calculator : None Response Time : N.A Think Time : N.A Minimum Instruction Time : 0

Correct Marks : 5 Wrong Marks : 1

Question Key Details :

Key	Value
Comprehension	MCQ

Choose the correct statements

- A. The 42nd Amendment Act ushered the era of Human Rights in India
- B. The 42nd Amendment Act 1976 added Articles 323 A and 323 B to the Constitution of India
- C. Administrative Tribunals Act 1985 was enacted to cater the needs of SC/ST/OBC people.
- D. In L Chandra Kumar case, the seven judge bench of the Supreme Court held that tribunals would not take away the exclusive jurisdiction of the courts.

Choose the correct answer from the options given below:

1. A, B, C only
2. B and C only
3. B and D only
4. C and D only

Options :

- 485584135417. 1
- 485584135418. 2
- 485584135419. 3

485584135420.4

Question Number : 271 Question Id : 48558433856 Question Type : MCQ Option Shuffling : No Is Question Mandatory : No Calculator : None Response Time : N.A Think Time : N.A Minimum Instruction Time : 0

Correct Marks : 5 Wrong Marks : 1

Question Key Details :

Key	Value
Comprehension	MCQ

Central Vigilance Commission (CVC) was set up on the recommendation of which Committee:

1. Narsimhan Committee
2. Verma Committee
3. Tiwari Committee
4. Santhanam Committee

Options :

- 485584135421. 1
- 485584135422. 2
- 485584135423. 3
- 485584135424. 4

Question Number : 272 Question Id : 48558433857 Question Type : MCQ Option Shuffling : No Is Question Mandatory : No Calculator : None Response Time : N.A Think Time : N.A Minimum Instruction Time : 0

Correct Marks : 5 Wrong Marks : 1

Question Key Details :

Key	Value
Comprehension	MCQ

ADR methods are _____ when compared to conventional Judicial Procedure.

1. Speedier, Informal and cheaper
2. Speedier, formal and costly
3. Formal, cheaper and slow
4. Slow, cheaper and informal

Options :

- 485584135425. 1
- 485584135426. 2
- 485584135427. 3
- 485584135428. 4

Question Number : 273 Question Id : 48558433858 Question Type : MCQ Option Shuffling : No Is Question Mandatory : No Calculator : None Response Time : N.A Think Time : N.A Minimum Instruction Time : 0

Correct Marks : 5 Wrong Marks : 1

Question Key Details :

Key	Value
Comprehension	MCQ

The first Lok Adalat was held in India in Junagarh in Gujarat on:-

1. 14 March 1982
2. 15 March 1982
3. 14 May 1982
4. 15 April 1982

Options :

485584135429. 1
485584135430. 2
485584135431. 3
485584135432. 4

Question Number : 274 Question Id : 48558433859 Question Type : MCQ Option Shuffling : No Is Question Mandatory : No Calculator : None Response Time : N.A Think Time : N.A Minimum Instruction Time : 0

Correct Marks : 5 Wrong Marks : 1

Question Key Details :

Key	Value
Comprehension	MCQ

The Vedic age in India, witnessed specialised tribunal for settling disputes of family, community, tribe, caste and races.

Identify the name of the tribunal.

1. Kula
2. Shreni
3. Puga
4. Panchayat

Options :

485584135433. 1
485584135434. 2
485584135435. 3
485584135436. 4

Question Number : 275 Question Id : 48558433860 Question Type : MCQ Option Shuffling : No Is Question Mandatory : No Calculator : None Response Time : N.A Think Time : N.A Minimum Instruction Time : 0

Correct Marks : 5 Wrong Marks : 1

Question Key Details :

Key	Value
Comprehension	MCQ

According to Preamble of Indian Constitution secures to all its citizen:

- A. Secularism
- B. Justice
- C. Socialism
- D. Fraternity
- E. Sovereignty

Choose the correct answer from the options given below:

- 1. A, B only
- 2. B, D only
- 3. D, E only
- 4. A, C only

Options :

- 485584135437. 1
- 485584135438. 2
- 485584135439. 3
- 485584135440. 4

Question Number : 276 Question Id : 48558433861 Question Type : MCQ Option Shuffling : No Is Question Mandatory : No Calculator : None Response Time : N.A Think Time : N.A Minimum Instruction Time : 0

Correct Marks : 5 Wrong Marks : 1

Question Key Details :

Key	Value
Comprehension	MCQ

LAMP (Legislative Assistants to Members of Parliament) fellowship program, provides fellowship to law students interested in public policy. This (LAMP) program is run by:

- 1. Competition Commission of India
- 2. Bar Council of India
- 3. Securities and Exchange Board of India
- 4. PRS Legislative Research

Options :

- 485584135441. 1
- 485584135442. 2
- 485584135443. 3
- 485584135444. 4

Question Number : 277 Question Id : 48558433862 Question Type : MCQ Option Shuffling : No Is Question Mandatory : No Calculator : None Response Time : N.A Think Time : N.A Minimum Instruction Time : 0

Correct Marks : 5 Wrong Marks : 1

Question Key Details :

Key	Value
Comprehension	MCQ

In 1987, the first National Law School of India was set up in:

1. Jodhpur
2. Kolkata
3. Bangalore
4. Patna

Options :

485584135445. 1
485584135446. 2
485584135447. 3
485584135448. 4

Question Number : 278 Question Id : 48558433863 Question Type : MCQ Option Shuffling : No Is Question Mandatory : No Calculator : None Response Time : N.A Think Time : N.A Minimum Instruction Time : 0

Correct Marks : 5 Wrong Marks : 1

Question Key Details :

Key	Value
Comprehension	MCQ

Women were included in the legal profession after the enactment of_____.

1. Advocates Act, 1961
2. Legal Practitioners (Women) Act, 1923
3. Government of India Act, 1923
4. Legal Practitioners Act, 1846

Options :

485584135449. 1
485584135450. 2
485584135451. 3
485584135452. 4

Question Number : 279 Question Id : 48558433864 Question Type : MCQ Option Shuffling : No Is Question Mandatory : No Calculator : None Response Time : N.A Think Time : N.A Minimum Instruction Time : 0

Correct Marks : 5 Wrong Marks : 1

Question Key Details :

Key	Value
Comprehension	MCQ

Arrange the below mentioned incidents in the correct sequence leading to liberalization of the legal profession:

- A. Madras HC's decision permitting lawyers to practice in India on a 'Fly in and fly out' basis
- B. Amendment in Advocate Act for preparing a level playing field for Indian Lawyers
- C. Signing of WTO Treaty by Government of India
- D. Judgment of Bombay HC that foreign law firms could not be permitted to set up liaison office in India
- E. Resolution passed by Bar Council of India opposing the opening up of legal profession to foreign lawyers

Choose the correct answer from the options given below:

- 1. C - B - E - D - A
- 2. A - C - D - E - B
- 3. D - B - E - C - A
- 4. A - C - B - E - D

Options :

- 485584135453. 1
- 485584135454. 2
- 485584135455. 3
- 485584135456. 4

Question Number : 280 Question Id : 48558433865 Question Type : MCQ Option Shuffling : No Is Question Mandatory : No Calculator : None Response Time : N.A Think Time : N.A Minimum Instruction Time : 0

Correct Marks : 5 Wrong Marks : 1

Question Key Details :

Key	Value
Comprehension	MCQ

Match List I with List II

LIST I Countries		LIST II Regulation/Restriction on Advertisement	
A.	USA	I.	Bar Council of India Rules
B.	Malayasia	II.	Model Rules of Professional Conduct
C.	India	III.	Legal Profession (Publicity Rules) 2001
D.	Hongkong	IV.	Forbidden to advertise on television, radio and in cinemas

Choose the correct answer from the options given below:

- 1. A-I, B-II, C-IV, D-III
- 2. A-II, B-III, C-I, D-IV
- 3. A-III, B-IV, C-II, D-I
- 4. A-IV, B-I, C-III, D-II

Options :

- 485584135457. 1
- 485584135458. 2
- 485584135459. 3

Question Number : 281 Question Id : 48558433866 Question Type : MCQ Option Shuffling : No Is Question Mandatory : No Calculator : None Response Time : N.A Think Time : N.A Minimum Instruction Time : 0

Correct Marks : 5 Wrong Marks : 1

Question Key Details :

Key	Value
Comprehension	MCQ

Who among the following are allowed to practice law in India after the Advocates Act 1961?

- A. Barristers
- B. Advocates
- C. Advocate on Record
- D. Attorney General of India
- E. Pleaders

Choose the correct answer from the options given below:

- 1. A, B only
- 2. B, C only
- 3. C, D only
- 4. D, E only

Options :

- 485584135461. 1
- 485584135462. 2
- 485584135463. 3
- 485584135464. 4

Question Number : 282 Question Id : 48558433867 Question Type : MCQ Option Shuffling : No Is Question Mandatory : No Calculator : None Response Time : N.A Think Time : N.A Minimum Instruction Time : 0

Correct Marks : 5 Wrong Marks : 1

Question Key Details :

Key	Value
Comprehension	MCQ

Match List I with List II

LIST I		LIST II	
A.	14th Law Commission Report	I.	India became obliged to introduce free legal aid in domestic legislation
B.	Committee on Judicature	II.	Lok Adalat to be setup to promote free legal Aid
C.	Legal Services Authorities Act, 1987	III.	Promoted the idea of free Legal Aid
D.	Signing of ICCPR in 1976	IV.	Framework to provide free Legal aid prepared

Choose the correct answer from the options given below:

1. A-IV, B-I, C-III, D-II
2. A-I, B-II, C-IV, D-III
3. A-II, B-III, C-I, D-IV
4. A-III, B-IV, C-II, D-I

Options :

485584135465. 1
485584135466. 2
485584135467. 3
485584135468. 4

Question Number : 283 Question Id : 48558433868 Question Type : MCQ Option Shuffling : No Is Question Mandatory : No Calculator : None Response Time : N.A Think Time : N.A Minimum Instruction Time : 0

Correct Marks : 5 Wrong Marks : 1

Question Key Details :

Key	Value
Comprehension	MCQ

Which international organisation was initially originated as International Bank for Reconstruction and Development (IBRD)?

1. International Monetary Fund
2. World Bank
3. Reserve Bank
4. Monetary Bank of world

Options :

485584135469. 1
485584135470. 2
485584135471. 3
485584135472. 4

Question Number : 284 Question Id : 48558433869 Question Type : MCQ Option Shuffling : No Is Question Mandatory : No Calculator : None Response Time : N.A Think Time : N.A Minimum Instruction Time : 0

Correct Marks : 5 Wrong Marks : 1

Question Key Details :

Key	Value
Comprehension	MCQ

Arrange the following in order of establishment

- A. ILO
- B. UNESCO
- C. IMF
- D. WHO

Choose the correct answer from the options given below:

- 1. A - C - B - D
- 2. D - A - B - C
- 3. C - A - B - D
- 4. A - B - C - D

Options :

- 485584135473. 1
- 485584135474. 2
- 485584135475. 3
- 485584135476. 4

Question Number : 285 Question Id : 48558433870 Question Type : MCQ Option Shuffling : No Is Question Mandatory : No Calculator : None Response Time : N.A Think Time : N.A Minimum Instruction Time : 0

Correct Marks : 5 Wrong Marks : 1

Question Key Details :

Key	Value
Comprehension	MCQ

Which of the following is not a method by which a state may express its consent to be bound by a particular treaty:-

- 1. Consent by signature
- 2. Consent by exchange of instruments
- 3. Consent by verbal assurance of Head of State
- 4. Consent by ratification

Options :

- 485584135477. 1
- 485584135478. 2
- 485584135479. 3
- 485584135480. 4

Question Number : 286 Question Id : 48558433871 Question Type : MCQ Option Shuffling : No Is Question Mandatory : No Calculator : None Response Time : N.A Think Time : N.A Minimum Instruction Time : 0

Correct Marks : 5 Wrong Marks : 1

Question Key Details :

Key	Value
Comprehension	MCQ

Which of the following is a subsidiary source of International law according to Article 38(1) of ICJ statute?

1. International Conventions
2. International Customs
3. General Principles of International law
4. Teachings of most highly qualified Publicists

Options :

- 485584135481. 1
- 485584135482. 2
- 485584135483. 3
- 485584135484. 4

Question Number : 287 Question Id : 48558433872 Question Type : MCQ Option Shuffling : No Is Question Mandatory : No Calculator : None Response Time : N.A Think Time : N.A Minimum Instruction Time : 0

Correct Marks : 5 Wrong Marks : 1

Question Key Details :

Key	Value
Comprehension	MCQ

Choose the correct chronological order of the following

- A. The Hague conference focuses on wide array of aspects of private law.
- B. India adopted the UNCITRAL.
- C. ILO was set up after the war, as a part of Treaty of Versailles
- D. Human Rights Council is working for human rights issues.

Choose the correct answer from the options given below:

1. B, C, A, D
2. A, C, B, D
3. D, A, B, C
4. B, D, A, C

Options :

- 485584135485. 1
- 485584135486. 2
- 485584135487. 3
- 485584135488. 4

Question Number : 288 Question Id : 48558433873 Question Type : MCQ Option Shuffling : No Is Question Mandatory : No Calculator : None Response Time : N.A Think Time : N.A Minimum Instruction Time : 0

Correct Marks : 5 Wrong Marks : 1

Question Key Details :

Key	Value
Comprehension	MCQ

Article 59 of the statute of the ICJ states that except on parties to the dispute the decision of ICJ is

1. Not binding
2. binding on all states
3. based on consent of states
4. binding on Security Council

Options :

485584135489. 1
485584135490. 2
485584135491. 3
485584135492. 4

Question Number : 289 Question Id : 48558433874 Question Type : MCQ Option Shuffling : No Is Question Mandatory : No Calculator : None Response Time : N.A Think Time : N.A Minimum Instruction Time : 0

Correct Marks : 5 Wrong Marks : 1

Question Key Details :

Key	Value
Comprehension	MCQ

Match List I with List II

LIST I		LIST II	
A.	<i>Injuria Sine Damnum</i>	I.	Where there is right there is remedy
B.	<i>Bona fide</i>	II.	Let the buyer beware
C.	<i>Caveat Emptor</i>	III.	Injury without damage
D.	<i>Ubi Jus Ibi Remedium</i>	IV.	Good faith

Choose the correct answer from the options given below:

1. A-III, B-IV, C-II, D-I
2. A-I, B-II, C-III, D-IV
3. A-IV, B-III, C-I, D-II
4. A-I, B-IV, C-II, D-III

Options :

485584135493. 1
485584135494. 2
485584135495. 3
485584135496. 4

Question Number : 290 Question Id : 48558433875 Question Type : MCQ Option Shuffling : No Is Question Mandatory : No Calculator : None Response Time : N.A Think Time : N.A Minimum Instruction Time : 0

Correct Marks : 5 Wrong Marks : 1

Question Key Details :

Key	Value
Comprehension	MCQ

What is the meaning of the legal Maxim '*Ignorantia Facti Excusat- Ignorantia Juris Non Excusat*'

1. Ignorance of law is an excuse
2. Ignorance of law of fact is not an excuse
3. Ignorance of fact is an excuse but ignorance of law is not an excuse
4. Ignorance of fact is not an excuse

Options :

485584135497. 1
485584135498. 2
485584135499. 3
485584135500. 4

Sub-Section Number : 2
Sub-Section Id : 4855842432
Question Shuffling Allowed : No
Is Section Default? : null

Question Number : 291 Question Id : 48558433876 Question Type : MCQ Option Shuffling : No Is Question Mandatory : No Calculator : None Response Time : N.A Think Time : N.A Minimum Instruction Time : 0

Correct Marks : 5 Wrong Marks : 1

Question Key Details :

Key	Value
Comprehension	Comp1

Read the passage and answer the following questions:-

"In 2010, the National Legal Services Authority of India (NALSA) adopted the National Legal Service Authority (Free and Competent Legal Services) Regulations in exercise of its power under Section 29 of Legal Service Authorities Act, 1987. The regulations are applicable to Legal Service Committees of the Supreme Court, High Courts, the States, districts and taluks. The legal service institution is vested with authority to invite applications from legal practitioners with requisite experience to indicate the type of cases they are entrusted with."

To be part of panel of lawyers to provide legal aid, the practioner should have

1. 3 or more years experience at bar
2. less than 3 years experience at bar
3. 5 years experience at bar
4. 10 years experience at bar

Options :

485584135501. 1
485584135502. 2
485584135503. 3
485584135504. 4

Question Number : 292 Question Id : 48558433877 Question Type : MCQ Option Shuffling : No Is Question Mandatory : No Calculator : None Response Time : N.A Think Time : N.A Minimum Instruction Time : 0

Correct Marks : 5 Wrong Marks : 1

Question Key Details :

Key	Value
Comprehension	Comp1

Read the passage and answer the following questions:-

"In 2010, the National Legal Services Authority of India (NALSA) adopted the National Legal Service Authority (Free and Competent Legal Services) Regulations in exercise of its power under Section 29 of Legal Service Authorities Act, 1987. The regulations are applicable to Legal Service Committees of the Supreme Court, High Courts, the States, districts and taluks. The legal service institution is vested with authority to invite applications from legal practitioners with requisite experience to indicate the type of cases they are entrusted with."

Panel of legal aid lawyers is reconstituted

1. every year
2. every three years
3. every 5 years
4. every 2 years

Options :

- 485584135505. 1
- 485584135506. 2
- 485584135507. 3
- 485584135508. 4

Question Number : 293 Question Id : 48558433878 Question Type : MCQ Option Shuffling : No Is Question Mandatory : No Calculator : None Response Time : N.A Think Time : N.A Minimum Instruction Time : 0

Correct Marks : 5 Wrong Marks : 1

Question Key Details :

Key	Value
Comprehension	Comp1

Read the passage and answer the following questions:-

"In 2010, the National Legal Services Authority of India (NALSA) adopted the National Legal Service Authority (Free and Competent Legal Services) Regulations in exercise of its power under Section 29 of Legal Service Authorities Act, 1987. The regulations are applicable to Legal Service Committees of the Supreme Court, High Courts, the States, districts and taluks. The legal service institution is vested with authority to invite applications from legal practitioners with requisite experience to indicate the type of cases they are entrusted with."

For legal aid, services of senior lawyers can be availed only in

1. Murder cases
2. where there is threat to life and liberty of the applicant
3. financial matter
4. court martial

Options :

- 485584135509. 1
- 485584135510. 2
- 485584135511. 3
- 485584135512. 4

Question Number : 294 Question Id : 48558433879 Question Type : MCQ Option Shuffling : No Is Question Mandatory : No Calculator : None Response Time : N.A Think Time : N.A Minimum Instruction Time : 0

Correct Marks : 5 Wrong Marks : 1

Question Key Details :

Key	Value
Comprehension	Compl

Read the passage and answer the following questions:-

"In 2010, the National Legal Services Authority of India (NALSA) adopted the National Legal Service Authority (Free and Competent Legal Services) Regulations in exercise of its power under Section 29 of Legal Service Authorities Act, 1987. The regulations are applicable to Legal Service Committees of the Supreme Court, High Courts, the States, districts and taluks. The legal service institution is vested with authority to invite applications from legal practitioners with requisite experience to indicate the type of cases they are entrusted with."

Panel lawyers are paid fee in accordance with

1. State regulations
2. BCI norms
3. Central government scale
4. UGC norms

Options :

- 485584135513. 1
- 485584135514. 2
- 485584135515. 3
- 485584135516. 4

Question Number : 295 Question Id : 48558433880 Question Type : MCQ Option Shuffling : No Is Question Mandatory : No Calculator : None Response Time : N.A Think Time : N.A Minimum Instruction Time : 0

Correct Marks : 5 Wrong Marks : 1

Question Key Details :

Key	Value
-----	-------

Comprehension	Comp1
---------------	-------

Read the passage and answer the following questions:-

"In 2010, the National Legal Services Authority of India (NALSA) adopted the National Legal Service Authority (Free and Competent Legal Services) Regulations in exercise of its power under Section 29 of Legal Service Authorities Act, 1987. The regulations are applicable to Legal Service Committees of the Supreme Court, High Courts, the States, districts and taluks. The legal service institution is vested with authority to invite applications from legal practitioners with requisite experience to indicate the type of cases they are entrusted with."

Pre-litigation legal services include:

1. Legal education
2. Arbitration
3. Out of court settlement
4. appearance before judge

Options :

- 485584135517. 1
- 485584135518. 2
- 485584135519. 3
- 485584135520. 4

Sub-Section Number : 3
Sub-Section Id : 4855842433
Question Shuffling Allowed : No
Is Section Default? : null

Question Number : 296 Question Id : 48558433881 Question Type : MCQ Option Shuffling : No Is Question Mandatory : No Calculator : None Response Time : N.A Think Time : N.A Minimum Instruction Time : 0 Correct Marks : 5 Wrong Marks : 1

Question Key Details :

Key	Value
Comprehension	Comp2

The quasi-judicial bodies typically are public administrative agencies under the realm of the executive branch and are largely bestowed with authority similar to courts. These bodies have the power to resolve disputes and also impose punishments. Examples of quasi-judicial institutions include, national and state human rights commissions, consumer redressal forums and commissions, income tax tribunals, and so on. Some of these bodies relating specifically to human rights institutions that include, the National Human Rights Commission, National Commission for Minorities, National Commission for Women, National Commission for Scheduled Castes and the National Commission for Scheduled Tribes. These commissions are independent or autonomous and transparent bodies that are created under specific legislations to promote and protect human rights; for example, the National and State Human Rights Commissions are governed by the Protection of Human Rights Act, 1993. National commissions have jurisdiction over the entire nation and the parallel state commission take matters of human rights violations from the respective states.

The functioning of Quasi judicial bodies is similar to

1. Parliament
2. Judges
3. Magistrate
4. Courts

Options :

- 485584135521. 1
- 485584135522. 2
- 485584135523. 3
- 485584135524. 4

Question Number : 297 Question Id : 48558433882 Question Type : MCQ Option Shuffling : No Is Question Mandatory : No Calculator : None Response Time : N.A Think Time : N.A Minimum Instruction Time : 0

Correct Marks : 5 Wrong Marks : 1

Question Key Details :

Key	Value
Comprehension	Comp2

The quasi-judicial bodies typically are public administrative agencies under the realm of the executive branch and are largely bestowed with authority similar to courts. These bodies have the power to resolve disputes and also impose punishments. Examples of quasi-judicial institutions include, national and state human rights commissions, consumer redressal forums and commissions, income tax tribunals, and so on. Some of these bodies relating specifically to human rights institutions that include, the National Human Rights Commission, National Commission for Minorities, National Commission for Women, National Commission for Scheduled Castes and the National Commission for Scheduled Tribes. These commissions are independent or autonomous and transparent bodies that are created under specific legislations to promote and protect human rights; for example, the National and State Human Rights Commissions are governed by the Protection of Human Rights Act, 1993. National commissions have jurisdiction over the entire nation and the parallel state commission take matters of human rights violations from the respective states.

Which one of the following is not a Quasi judicial body

1. Human Rights Commission
2. Consumer Forums
3. Income Tax Tribunals
4. Parliament

Options :

- 485584135525. 1
- 485584135526. 2
- 485584135527. 3
- 485584135528. 4

Question Number : 298 Question Id : 48558433883 Question Type : MCQ Option Shuffling : No Is Question Mandatory : No Calculator : None Response Time : N.A Think Time : N.A Minimum Instruction Time : 0

Correct Marks : 5 Wrong Marks : 1

Question Key Details :

Key	Value
Comprehension	Comp2

The quasi-judicial bodies typically are public administrative agencies under the realm of the executive branch and are largely bestowed with authority similar to courts. These bodies have the power to resolve disputes and also impose punishments. Examples of quasi-judicial institutions include, national and state human rights commissions, consumer redressal forums and commissions, income tax tribunals, and so on. Some of these bodies relating specifically to human rights institutions that include, the National Human Rights Commission, National Commission for Minorities, National Commission for Women, National Commission for Scheduled Castes and the National Commission for Scheduled Tribes. These commissions are independent or autonomous and transparent bodies that are created under specific legislations to promote and protect human rights; for example, the National and State Human Rights Commissions are governed by the Protection of Human Rights Act, 1993. National commissions have jurisdiction over the entire nation and the parallel state commission take matters of human rights violations from the respective states.

The National Human Rights Commission is enacted to protect

1. Geographical Rights
2. Human Rights
3. Patent Rights
4. Copyright Rights

Options :

485584135529. 1

485584135530. 2

485584135531. 3

485584135532. 4

Question Number : 299 Question Id : 48558433884 Question Type : MCQ Option Shuffling : No Is Question Mandatory : No Calculator : None Response Time : N.A Think Time : N.A Minimum Instruction Time : 0

Correct Marks : 5 Wrong Marks : 1

Question Key Details :

Key	Value
Comprehension	Comp2

The quasi-judicial bodies typically are public administrative agencies under the realm of the executive branch and are largely bestowed with authority similar to courts. These bodies have the power to resolve disputes and also impose punishments. Examples of quasi-judicial institutions include, national and state human rights commissions, consumer redressal forums and commissions, income tax tribunals, and so on. Some of these bodies relating specifically to human rights institutions that include, the National Human Rights Commission, National Commission for Minorities, National Commission for Women, National Commission for Scheduled Castes and the National Commission for Scheduled Tribes. These commissions are independent or autonomous and transparent bodies that are created under specific legislations to promote and protect human rights; for example, the National and State Human Rights Commissions are governed by the Protection of Human Rights Act, 1993. National commissions have jurisdiction over the entire nation and the parallel state commission take matters of human rights violations from the respective states.

The State Human Rights Commission is subordinate to

1. Competition Commission of India
2. Supreme Court of India
3. High Court of the state
4. National Human Rights Commission

Options :

- 485584135533. 1
- 485584135534. 2
- 485584135535. 3
- 485584135536. 4

Question Number : 300 Question Id : 48558433885 Question Type : MCQ Option Shuffling : No Is Question Mandatory : No Calculator : None Response Time : N.A Think Time : N.A Minimum Instruction Time : 0

Correct Marks : 5 Wrong Marks : 1

Question Key Details :

Key	Value
Comprehension	Comp2

The quasi-judicial bodies typically are public administrative agencies under the realm of the executive branch and are largely bestowed with authority similar to courts. These bodies have the power to resolve disputes and also impose punishments. Examples of quasi-judicial institutions include, national and state human rights commissions, consumer redressal forums and commissions, income tax tribunals, and so on. Some of these bodies relating specifically to human rights institutions that include, the National Human Rights Commission, National Commission for Minorities, National Commission for Women, National Commission for Scheduled Castes and the National Commission for Scheduled Tribes. These commissions are independent or autonomous and transparent bodies that are created under specific legislations to promote and protect human rights; for example, the National and State Human Rights Commissions are governed by the Protection of Human Rights Act, 1993. National commissions have jurisdiction over the entire nation and the parallel state commission take matters of human rights violations from the respective states.

The National and State Human Rights Commission are governed under _____.

1. Environment Protection Act, 1986
2. Protection of Human Rights Act, 1993
3. Consumer of Protection Act, 2019
4. Protection of Civil Rights Act, 1955

Options :

- 485584135537. 1
- 485584135538. 2
- 485584135539. 3
- 485584135540. 4

Performing Arts

Group Number :	10
Group Id :	485584748
Group Maximum Duration :	45
Group Minimum Duration :	45
Show Attended Group? :	No
Edit Attended Group? :	No
Break time :	0
Group Marks :	200
Is this Group for Examiner? :	No
Examiner permission :	Cant View
Show Progress Bar? :	No

Compulsory

Section Id :	485584862
Section Number :	1
Section type :	Online
Mandatory or Optional :	Mandatory
Number of Questions :	20
Number of Questions to be attempted :	20
Section Marks :	100
Enable Mark as Answered Mark for Review and Clear Response :	Yes
Maximum Instruction Time :	0
Sub-Section Number :	1
Sub-Section Id :	4855842434
Question Shuffling Allowed :	No
Is Section Default? :	null

Question Number : 301 Question Id : 48558433616 Question Type : MCQ Option Shuffling : No Is Question Mandatory :
No Calculator : None Response Time : N.A Think Time : N.A Minimum Instruction Time : 0
Correct Marks : 5 Wrong Marks : 1

Question Key Details :

Key	Value
Comprehension	Comp1

Read the paragraph and answer the following questions:

Raga has been manifested through Anibaddha and Nibaddha. Anibaddha refers to free extempore development of a raga. In ancient period, it was done under the concept of Alapti. Alapti is of two types - Ragalapti and Rupkalapti. alapti is governed by Svasthana. there are four types of Svasthana known as Prathama, Dvitya, Tritiya and Chaturtha Svasthana. Rupkalapti is done in two steps, that is, Pratigrahanika and Bhanjani. Bhanjani can further be done in two ways which are Sthaya Bhanjani and Rupak Bhanjani.

Anibaddha is :

1. A composition fixed to Tala
2. A free extempore development of a raga
3. A composition set to Teental
4. A development of a raga with Tanas set to Tala

Options :

485584134461. 1
485584134462. 2
485584134463. 3
485584134464. 4

Question Number : 302 Question Id : 48558433617 Question Type : MCQ Option Shuffling : No Is Question Mandatory : No Calculator : None Response Time : N.A Think Time : N.A Minimum Instruction Time : 0

Correct Marks : 5 Wrong Marks : 1

Question Key Details :

Key	Value
Comprehension	Comp1

Read the paragraph and answer the following questions:

Raga has been manifested through Anibaddha and Nibaddha. Anibaddha refers to free extempore development of a raga. In ancient period, it was done under the concept of Alapti. Alapti is of two types - Ragalapti and Rupkalapti. alapti is governed by Svasthana. there are four types of Svasthana known as Prathama, Dvitya, Tritiya and Chaturtha Svasthana. Rupkalapti is done in two steps, that is, Pratigrahanika and Bhanjani. Bhanjani can further be done in two ways which are Sthaya Bhanjani and Rupak Bhanjani.

How many varieties of Alapti are there?

1. 2
2. 4
3. 5
4. 7

Options :

485584134465. 1
485584134466. 2
485584134467. 3
485584134468. 4

Question Number : 303 Question Id : 48558433618 Question Type : MCQ Option Shuffling : No Is Question Mandatory : No Calculator : None Response Time : N.A Think Time : N.A Minimum Instruction Time : 0

Correct Marks : 5 Wrong Marks : 1

Question Key Details :

Key	Value
Comprehension	Comp1

Read the paragraph and answer the following questions:

Raga has been manifested through Anibaddha and Nibaddha. Anibaddha refers to free extempore development of a raga. In ancient period, it was done under the concept of Alapti. Alapti is of two types - Ragalapti and Rupkalapti. alapti is governed by Svasthana. there are four types of Svasthana known as Prathama, Dvitya, Tritiya and Chaturtha Svasthana. Rupkalapti is done in two steps, that is, Pratigrahanika and Bhanjani. Bhanjani can further be done in two ways which are Sthaya Bhanjani and Rupak Bhanjani.

Alapti is governed by :

1. Sthaya
2. Nature of Tala
3. Svasthana
4. Nibaddha

Options :

485584134469. 1
485584134470. 2
485584134471. 3
485584134472. 4

Question Number : 304 Question Id : 48558433619 Question Type : MCQ Option Shuffling : No Is Question Mandatory : No Calculator : None Response Time : N.A Think Time : N.A Minimum Instruction Time : 0

Correct Marks : 5 Wrong Marks : 1

Question Key Details :

Key	Value
Comprehension	Compl

Read the paragraph and answer the following questions:

Raga has been manifested through Anibaddha and Nibaddha. Anibaddha refers to free extempore development of a raga. In ancient period, it was done under the concept of Alapti. Alapti is of two types - Ragalapti and Rupkalapti. alapti is governed by Svasthana. there are four types of Svasthana known as Prathama, Dvitya, Tritiya and Chaturtha Svasthana. Rupkalapti is done in two steps, that is, Pratigrahanika and Bhanjani. Bhanjani can further be done in two ways which are Sthaya Bhanjani and Rupak Bhanjani.

Pratigrahanika and Bhanjani are the varieties of :

1. Dhatu
2. Gram
3. Prathama
4. Rupkalapti

Options :

485584134473. 1
485584134474. 2
485584134475. 3

Question Number : 305 Question Id : 48558433620 Question Type : MCQ Option Shuffling : No Is Question Mandatory : No Calculator : None Response Time : N.A Think Time : N.A Minimum Instruction Time : 0

Correct Marks : 5 Wrong Marks : 1

Question Key Details :

Key	Value
Comprehension	Comp1

Read the paragraph and answer the following questions:

Raga has been manifested through Anibaddha and Nibaddha. Anibaddha refers to free extempore development of a raga. In ancient period, it was done under the concept of Alapti. Alapti is of two types - Ragalapti and Rupkalapti. alapti is governed by Svasthana. there are four types of Svasthana known as Prathama, Dvitya, Tritiya and Chaturtha Svasthana. Rupkalapti is done in two steps, that is, Pratigrahanika and Bhanjani. Bhanjani can further be done in two ways which are Sthaya Bhanjani and Rupak Bhanjani.

The two types of Bhanjani are:

1. Sthaya and Rupak
2. Rupak and Prathama
3. Tritiya and Sthaya
4. Rupak and Chathurtha

Options :

485584134477. 1

485584134478. 2

485584134479. 3

485584134480. 4

Sub-Section Number :

2

Sub-Section Id :

4855842435

Question Shuffling Allowed :

No

Is Section Default? :

null

Question Number : 306 Question Id : 48558433621 Question Type : MCQ Option Shuffling : No Is Question Mandatory : No Calculator : None Response Time : N.A Think Time : N.A Minimum Instruction Time : 0

Correct Marks : 5 Wrong Marks : 1

Question Key Details :

Key	Value
Comprehension	Comp2

Read the paragraph and answer the following questions:

The Nobel recipient Rabindranath Tagore had a great place for Manipuri dance in his heart. He was attracted to the Manipuri dance form for its many features. In his poem "Chitrangada", which was later transformed into a dance drama, he takes the story to the land of Manipur. We have seen that Tagore was absorbed in padavali lyrics at a very tender age for the beautiful compositional and the descriptive aspect of the padavali poems. He wrote quite a few poems in Brajbuli like vaishnava lyrics in the pen name Bhanusingha which are a collection under the name of "Bhanusingher Padavali". These lyrics serve as a perfect accompaniment to Manipuri dances and often Bhanusingher Padavalis are performed as a dance drama in Manipuri dance style today.

What was the pen name of the author of 'Bhanusingher Padavali'?

1. Rabindranath Tagore
2. Bhanusingha
3. Chitrangada
4. Vaishnava

Options :

485584134481. 1
485584134482. 2
485584134483. 3
485584134484. 4

Question Number : 307 Question Id : 48558433622 Question Type : MCQ Option Shuffling : No Is Question Mandatory : No Calculator : None Response Time : N.A Think Time : N.A Minimum Instruction Time : 0

Correct Marks : 5 Wrong Marks : 1

Question Key Details :

Key	Value
Comprehension	Comp2

Read the paragraph and answer the following questions:

The Nobel recipient Rabindranath Tagore had a great place for Manipuri dance in his heart. He was attracted to the Manipuri dance form for its many features. In his poem "Chitrangada", which was later transformed into a dance drama, he takes the story to the land of Manipur. We have seen that Tagore was absorbed in padavali lyrics at a very tender age for the beautiful compositional and the descriptive aspect of the padavali poems. He wrote quite a few poems in Brajbuli like vaishnava lyrics in the pen name Bhanusingha which are a collection under the name of "Bhanusingher Padavali". These lyrics serve as a perfect accompaniment to Manipuri dances and often Bhanusingher Padavalis are performed as a dance drama in Manipuri dance style today.

Who got the "Nobel Prize" for his book of poems "Geetanjali"?

1. Rabindranath Tagore
2. Abnindranath Tagore
3. Sachindranath Tagore
4. Brijendranath Tagore

Options :

485584134485. 1
485584134486. 2
485584134487. 3
485584134488. 4

Question Number : 308 Question Id : 48558433623 Question Type : MCQ Option Shuffling : No Is Question Mandatory : No Calculator : None Response Time : N.A Think Time : N.A Minimum Instruction Time : 0

Correct Marks : 5 Wrong Marks : 1

Question Key Details :

Key	Value
Comprehension	Comp2

Read the paragraph and answer the following questions:

The Nobel recipient Rabindranath Tagore had a great place for Manipuri dance in his heart. He was attracted to the Manipuri dance form for its many features. In his poem "Chitrangada", which was later transformed into a dance drama, he takes the story to the land of Manipur. We have seen that Tagore was absorbed in padavali lyrics at a very tender age for the beautiful compositional and the descriptive aspect of the padavali poems. He wrote quite a few poems in Brajbuli like vaishnava lyrics in the pen name Bhanusingha which are a collection under the name of "Bhanusingher Padavali". These lyrics serve as a perfect accompaniment to Manipuri dances and often Bhanusingher Padavalis are performed as a dance drama in Manipuri dance style today.

Which poem written by Tagore was later turned into a dance-drama in Manipuri dance?

1. Chandalika
2. Geetanjali
3. Sujata
4. Chitrangada

Options :

485584134489. 1
485584134490. 2
485584134491. 3
485584134492. 4

Question Number : 309 Question Id : 48558433624 Question Type : MCQ Option Shuffling : No Is Question Mandatory : No Calculator : None Response Time : N.A Think Time : N.A Minimum Instruction Time : 0

Correct Marks : 5 Wrong Marks : 1

Question Key Details :

Key	Value
Comprehension	Comp2

Read the paragraph and answer the following questions:

The Nobel recipient Rabindranath Tagore had a great place for Manipuri dance in his heart. He was attracted to the Manipuri dance form for its many features. In his poem "Chitrangada", which was later transformed into a dance drama, he takes the story to the land of Manipur. We have seen that Tagore was absorbed in padavali lyrics at a very tender age for the beautiful compositional and the descriptive aspect of the padavali poems. He wrote quite a few poems in Brajbuli like vaishnava lyrics in the pen name Bhanusingha which are a collection under the name of "Bhanusingher Padavali". These lyrics serve as a perfect accompaniment to Manipuri dances and often Bhanusingher Padavalis are performed as a dance drama in Manipuri dance style today.

Which classical dance form had a great place in the heart of Rabindranath Tagore?

1. Mohiniattam
2. Odissi
3. Manipuri
4. Sattriya

Options :

485584134493. 1
485584134494. 2
485584134495. 3
485584134496. 4

Question Number : 310 Question Id : 48558433625 Question Type : MCQ Option Shuffling : No Is Question Mandatory : No Calculator : None Response Time : N.A Think Time : N.A Minimum Instruction Time : 0

Correct Marks : 5 Wrong Marks : 1

Question Key Details :

Key	Value
Comprehension	Comp2

Read the paragraph and answer the following questions:

The Nobel recipient Rabindranath Tagore had a great place for Manipuri dance in his heart. He was attracted to the Manipuri dance form for its many features. In his poem "Chitrangada", which was later transformed into a dance drama, he takes the story to the land of Manipur. We have seen that Tagore was absorbed in padavali lyrics at a very tender age for the beautiful compositional and the descriptive aspect of the padavali poems. He wrote quite a few poems in Brajbuli like vaishnava lyrics in the pen name Bhanusingha which are a collection under the name of "Bhanusingher Padavali". These lyrics serve as a perfect accompaniment to Manipuri dances and often Bhanusingher Padavalis are performed as a dance drama in Manipuri dance style today.

"Bhanusingher Padavali" was written in which language?

1. Brajvalli
2. Bengali
3. Brajbuli
4. Pali

Options :

485584134497. 1
485584134498. 2
485584134499. 3
485584134500. 4

Sub-Section Number : 3
Sub-Section Id : 4855842436
Question Shuffling Allowed : No
Is Section Default? : null

Question Number : 311 Question Id : 48558433626 Question Type : MCQ Option Shuffling : No Is Question Mandatory : No Calculator : None Response Time : N.A Think Time : N.A Minimum Instruction Time : 0

Correct Marks : 5 Wrong Marks : 1

Question Key Details :

Key	Value
Comprehension	Comp3

There is a great importance of laya in Indian Talas. Laya has been categorised basically into three types - Vilambit, Madhya and Druta. The rule of application in various forms of laya is called 'Yati'. Yati denotes application of 'gati'. Yati has been classified into five types, Sama, Strotogata, Gopuchha, Mridanga and Pipilika. In sama yati, the same laya is used throughout, that is beginning to end. In strotogata, initially we use slow (vilambit) laya whereas Madhya occurs in the middle and Drut laya comes at the end. When it comes to Gopuchha, exactly inverse order of layas is put to application vis a vis strotogata meaning thereby in the later Druta, Madhya laya and Vilambit laya occurs in the first, middle and last order. In Mridanga, drut laya is used at the outset as well as at the end and Madhya laya is used amidst thereof. In Pipilika, vilambit laya occurs in the beginning, at the end while madhya laya is used in middle order, hence 'Yati' is an important aspect of tala's Das Pranas.

Read the above passage and answer the following questions:

Which is the part of Ten pranas of Talas?

1. Chakradar
2. Uthan
3. Yati
4. Peshkar

Options :

485584134501. 1
485584134502. 2
485584134503. 3

Question Number : 312 Question Id : 48558433627 Question Type : MCQ Option Shuffling : No Is Question Mandatory : No Calculator : None Response Time : N.A Think Time : N.A Minimum Instruction Time : 0

Correct Marks : 5 Wrong Marks : 1

Question Key Details :

Key	Value
Comprehension	Comp3

There is a great importance of laya in Indian Talas. Laya has been categorised basically into three types - Vilambit, Madhya and Druta. The rule of application in various forms of laya is called 'Yati'. Yati denotes application of 'gati'. Yati has been classified into five types, Sama, Strotogata, Gopuchha, Mridanga and Pipilika. In sama yati, the same laya is used throughout, that is beginning to end. In strotogata, initially we use slow (vilambit) laya whereas Madhya occurs in the middle and Drut laya comes at the end. When it comes to Gopuchha, exactly inverse order of layas is put to application vis a vis strotogata meaning thereby in the later Druta, Madhya laya and Vilambit laya occurs in the first, middle and last order. In Mridanga, drut laya is used at the outset as well as at the end and Madhya laya is used amidst thereof. In Pipilika, vilambit laya occurs in the beginning, at the end while madhya laya is used in middle order, hence 'Yati' is an important aspect of tala's Das Pranas.

Read the above passage and answer the following questions:

How many types of Yati are there?

1. 3
2. 5
3. 6
4. 8

Options :

485584134505. 1
485584134506. 2
485584134507. 3
485584134508. 4

Question Number : 313 Question Id : 48558433628 Question Type : MCQ Option Shuffling : No Is Question Mandatory : No Calculator : None Response Time : N.A Think Time : N.A Minimum Instruction Time : 0

Correct Marks : 5 Wrong Marks : 1

Question Key Details :

Key	Value
Comprehension	Comp3

There is a great importance of laya in Indian Talas. Laya has been categorised basically into three types - Vilambit, Madhya and Druta. The rule of application in various forms of laya is called 'Yati'. Yati denotes application of 'gati'. Yati has been classified into five types, Sama, Strotogata, Gopuchha, Mridanga and Pipilika. In sama yati, the same laya is used throughout, that is beginning to end. In strotogata, initially we use slow (vilambit) laya whereas Madhya occurs in the middle and Drut laya comes at the end. When it comes to Gopuchha, exactly inverse order of layas is put to application vis a vis strotogata meaning thereby in the later Druta, Madhya laya and Vilambit laya occurs in the first, middle and last order. In Mridanga, drut laya is used at the outset as well as at the end and Madhya laya is used amidst thereof. In Pipilika, vilambit laya occurs in the beginning, at the end while madhya laya is used in middle order, hence 'Yati' is an important aspect of tala's Das Pranas.

Read the above passage and answer the following questions:

Application of laya in Sama yati is:

1. Drut, Madhya, Drut
2. Madhya, Drut, Madhya
3. Same laya from beginning to end
4. Drut laya at the beginning and end, and vilambit laya in the middle

Options :

485584134509. 1
485584134510. 2
485584134511. 3
485584134512. 4

Question Number : 314 Question Id : 48558433629 Question Type : MCQ Option Shuffling : No Is Question Mandatory : No Calculator : None Response Time : N.A Think Time : N.A Minimum Instruction Time : 0

Correct Marks : 5 Wrong Marks : 1

Question Key Details :

Key	Value
Comprehension	Comp3

There is a great importance of laya in Indian Talas. Laya has been categorised basically into three types - Vilambit, Madhya and Druta. The rule of application in various forms of laya is called 'Yati'. Yati denotes application of 'gati'. Yati has been classified into five types, Sama, Strotogata, Gopuchha, Mridanga and Pipilika. In sama yati, the same laya is used throughout, that is beginning to end. In strotogata, initially we use slow (vilambit) laya whereas Madhya occurs in the middle and Drut laya comes at the end. When it comes to Gopuchha, exactly inverse order of layas is put to application vis a vis strotogata meaning thereby in the later Druta, Madhya laya and Vilambit laya occurs in the first, middle and last order. In Mridanga, drut laya is used at the outset as well as at the end and Madhya laya is used amidst thereof. In Pipilika, vilambit laya occurs in the beginning, at the end while madhya laya is used in middle order, hence 'Yati' is an important aspect of tala's Das Pranas.

Read the above passage and answer the following questions:

Drut in the beginning and end, and Madhya laya in the middle is:

1. Sama
2. Pipilika
3. Gopuccha
4. Mridanga

Options :

485584134513. 1
485584134514. 2
485584134515. 3
485584134516. 4

Question Number : 315 Question Id : 48558433630 Question Type : MCQ Option Shuffling : No Is Question Mandatory : No Calculator : None Response Time : N.A Think Time : N.A Minimum Instruction Time : 0

Correct Marks : 5 Wrong Marks : 1

Question Key Details :

Key	Value
Comprehension	Comp3

There is a great importance of laya in Indian Talas. Laya has been categorised basically into three types - Vilambit, Madhya and Druta. The rule of application in various forms of laya is called 'Yati'. Yati denotes application of 'gati'. Yati has been classified into five types, Sama, Strotogata, Gopuchha, Mridanga and Pipilika. In sama yati, the same laya is used throughout, that is beginning to end. In strotogata, initially we use slow (vilambit) laya whereas Madhya occurs in the middle and Drut laya comes at the end. When it comes to Gopuchha, exactly inverse order of layas is put to application vis a vis strotogata meaning thereby in the later Druta, Madhya laya and Vilambit laya occurs in the first, middle and last order. In Mridanga, drut laya is used at the outset as well as at the end and Madhya laya is used amidst thereof. In Pipilika, vilambit laya occurs in the beginning, at the end while madhya laya is used in middle order, hence 'Yati' is an important aspect of tala's Das Pranas.

Read the above passage and answer the following questions:

The sequence of laya in strotogata is:

1. Vilambit - Madhya - Drut
2. Drut - Madhya - Drut
3. Drut - Drut - Madhya
4. Madhya - Vilambit - Drut

Options :

485584134517. 1
485584134518. 2
485584134519. 3
485584134520. 4

Sub-Section Number :

4

Sub-Section Id :

4855842437

Question Shuffling Allowed :

No

Is Section Default? :

null

Question Number : 316 Question Id : 48558433631 Question Type : MCQ Option Shuffling : No Is Question Mandatory : No Calculator : None Response Time : N.A Think Time : N.A Minimum Instruction Time : 0

Correct Marks : 5 Wrong Marks : 1

Question Key Details :

Key	Value
Comprehension	Comp4

Read the following passage and answer the questions given below:

Sangeet Natak Akademi (SNA)

The SNA was established on 31 May 1952. In his speech at the inauguration on 28 January 1953, Maulana Azad (1888-1958), then Union Minister for Education and later founder of the Indian Council for Cultural Relations (ICCR), said that the aim of the SNA was to 'preserve our traditions by offering them an institutional form'.

The SNA's mission, stated in its Memorandum of Association is:

To promote research in the fields of Indian music, dance and drama and for this purpose to establish a library and a museum; to encourage the exchange of ideas and enrichment of techniques between the different regions in regard to the arts of music, dance and drama; to publish research on Indian performing arts; to revive and preserve folk traditions in different regions; to sponsor and encourage festival, seminars and conferences; to give recognition to individual artists for outstanding achievement; to foster cultural contacts between different regions of the country and with other countries; and to cooperate with similar Akademis, institutions and associations for the furtherance of these objectives

With respect to theatre, the SNA holds workshops for playwrights; funds interstate cultural exchange programmes; funds research in the traditional performing arts; offers financial support to cultural institutions; organizes festivals of modern theatre, traditional performance, shadow theatre, marionette theatre and other forms of puppetry; gives awards and fellowship to distinguished artists; collects audiotapes, videos and photographs; and maintains an audiovisual archive as well as a library.

When was the Sangeet Natak Akademi inaugurated?

1. 1952
2. 1953
3. 1954
4. 1950

Options :

485584134521. 1
485584134522. 2
485584134523. 3
485584134524. 4

Question Number : 317 Question Id : 48558433632 Question Type : MCQ Option Shuffling : No Is Question Mandatory : No Calculator : None Response Time : N.A Think Time : N.A Minimum Instruction Time : 0

Correct Marks : 5 Wrong Marks : 1

Question Key Details :

Key	Value
Comprehension	Comp4

Read the following passage and answer the questions given below:

Sangeet Natak Akademi (SNA)

The SNA was established on 31 May 1952. In his speech at the inauguration on 28 January 1953, Maulana Azad (1888-1958), then Union Minister for Education and later founder of the Indian Council for Cultural Relations (ICCR), said that the aim of the SNA was to 'preserve our traditions by offering them an institutional form'.

The SNA's mission, stated in its Memorandum of Association is:

To promote research in the fields of Indian music, dance and drama and for this purpose to establish a library and a museum; to encourage the exchange of ideas and enrichment of techniques between the different regions in regard to the arts of music, dance and drama; to publish research on Indian performing arts; to revive and preserve folk traditions in different regions; to sponsor and encourage festival, seminars and conferences; to give recognition to individual artists for outstanding achievement; to foster cultural contacts between different regions of the country and with other countries; and to cooperate with similar Akademis, institutions and associations for the furtherance of these objectives

With respect to theatre, the SNA holds workshops for playwrights; funds interstate cultural exchange programmes; funds research in the traditional performing arts; offers financial support to cultural institutions; organizes festivals of modern theatre, traditional performance, shadow theatre, marionette theatre and other forms of puppetry; gives awards and fellowship to distinguished artists; collects audiotapes, videos and photographs; and maintains an audiovisual archive as well as a library.

Who among the following was independent India's first Union Minister for Education?

1. Babasaheb Ambedkar
2. Sardar Vallabhbhai Patel
3. Maulana Azad
4. Rajendra Prasad

Options :

485584134525. 1
485584134526. 2
485584134527. 3
485584134528. 4

Question Number : 318 Question Id : 48558433633 Question Type : MCQ Option Shuffling : No Is Question Mandatory : No Calculator : None Response Time : N.A Think Time : N.A Minimum Instruction Time : 0

Correct Marks : 5 Wrong Marks : 1

Question Key Details :

Key	Value
Comprehension	Comp4

Read the following passage and answer the questions given below:

Sangeet Natak Akademi (SNA)

The SNA was established on 31 May 1952. In his speech at the inauguration on 28 January 1953, Maulana Azad (1888-1958), then Union Minister for Education and later founder of the Indian Council for Cultural Relations (ICCR), said that the aim of the SNA was to 'preserve our traditions by offering them an institutional form'.

The SNA's mission, stated in its Memorandum of Association is:

To promote research in the fields of Indian music, dance and drama and for this purpose to establish a library and a museum; to encourage the exchange of ideas and enrichment of techniques between the different regions in regard to the arts of music, dance and drama; to publish research on Indian performing arts; to revive and preserve folk traditions in different regions; to sponsor and encourage festival, seminars and conferences; to give recognition to individual artists for outstanding achievement; to foster cultural contacts between different regions of the country and with other countries; and to cooperate with similar Akademis, institutions and associations for the furtherance of these objectives

With respect to theatre, the SNA holds workshops for playwrights; funds interstate cultural exchange programmes; funds research in the traditional performing arts; offers financial support to cultural institutions; organizes festivals of modern theatre, traditional performance, shadow theatre, marionette theatre and other forms of puppetry; gives awards and fellowship to distinguished artists; collects audiotapes, videos and photographs; and maintains an audiovisual archive as well as a library.

'To preserve our traditions by offering them an institutional form', was the aim of:

1. Indian Council for Cultural Relations
2. National School of Drama
3. Lalitkala Akademi
4. Sangeet Natak Akademi

Options :

- 485584134529. 1
- 485584134530. 2
- 485584134531. 3
- 485584134532. 4

Question Number : 319 Question Id : 48558433634 Question Type : MCQ Option Shuffling : No Is Question Mandatory : No Calculator : None Response Time : N.A Think Time : N.A Minimum Instruction Time : 0

Correct Marks : 5 Wrong Marks : 1

Question Key Details :

Key	Value
Comprehension	Comp4

Read the following passage and answer the questions given below:

Sangeet Natak Akademi (SNA)

The SNA was established on 31 May 1952. In his speech at the inauguration on 28 January 1953, Maulana Azad (1888-1958), then Union Minister for Education and later founder of the Indian Council for Cultural Relations (ICCR), said that the aim of the SNA was to 'preserve our traditions by offering them an institutional form'.

The SNA's mission, stated in its Memorandum of Association is:

To promote research in the fields of Indian music, dance and drama and for this purpose to establish a library and a museum; to encourage the exchange of ideas and enrichment of techniques between the different regions in regard to the arts of music, dance and drama; to publish research on Indian performing arts; to revive and preserve folk traditions in different regions; to sponsor and encourage festival, seminars and conferences; to give recognition to individual artists for outstanding achievement; to foster cultural contacts between different regions of the country and with other countries; and to cooperate with similar Akademis, institutions and associations for the furtherance of these objectives

With respect to theatre, the SNA holds workshops for playwrights; funds interstate cultural exchange programmes; funds research in the traditional performing arts; offers financial support to cultural institutions; organizes festivals of modern theatre, traditional performance, shadow theatre, marionette theatre and other forms of puppetry; gives awards and fellowship to distinguished artists; collects audiotapes, videos and photographs; and maintains an audiovisual archive as well as a library.

Which among the following is NOT SNA's mission as stated in its Memorandum of Association?

1. To promote research in the fields of Indian Visual Arts
2. To publish research on Indian Performing Arts
3. To revive and preserve folk traditions in different regions
4. To sponsor and encourage festivals, seminars and conferences

Options :

485584134533. 1

485584134534. 2

485584134535. 3

485584134536. 4

Question Number : 320 Question Id : 48558433635 Question Type : MCQ Option Shuffling : No Is Question Mandatory : No Calculator : None Response Time : N.A Think Time : N.A Minimum Instruction Time : 0

Correct Marks : 5 Wrong Marks : 1

Question Key Details :

Key	Value
Comprehension	Comp4

Read the following passage and answer the questions given below:

Sangeet Natak Akademi (SNA)

The SNA was established on 31 May 1952. In his speech at the inauguration on 28 January 1953, Maulana Azad (1888-1958), then Union Minister for Education and later founder of the Indian Council for Cultural Relations (ICCR), said that the aim of the SNA was to 'preserve our traditions by offering them an institutional form'.

The SNA's mission, stated in its Memorandum of Association is:

To promote research in the fields of Indian music, dance and drama and for this purpose to establish a library and a museum; to encourage the exchange of ideas and enrichment of techniques between the different regions in regard to the arts of music, dance and drama; to publish research on Indian performing arts; to revive and preserve folk traditions in different regions; to sponsor and encourage festival, seminars and conferences; to give recognition to individual artists for outstanding achievement; to foster cultural contacts between different regions of the country and with other countries; and to cooperate with similar Akademis, institutions and associations for the furtherance of these objectives

With respect to theatre, the SNA holds workshops for playwrights; funds interstate cultural exchange programmes; funds research in the traditional performing arts; offers financial support to cultural institutions; organizes festivals of modern theatre, traditional performance, shadow theatre, marionette theatre and other forms of puppetry; gives awards and fellowship to distinguished artists; collects audiotapes, videos and photographs; and maintains an audiovisual archive as well as a library.

According to the passage, identify the activities conducted by SNA, with respect to theatre.

- A. Funds international cultural exchange programmes
- B. Holds workshops for playwrights
- C. Funds research in the traditional Fine Arts
- D. Offers financial support to cultural institutions
- E. Gives awards and fellowships to distinguished artists

Choose the correct answer from the options given below:

1. A, B and D only
2. B, D and E only
3. B, C and E only
4. C, D and E only

Options :

- 485584134537. 1
- 485584134538. 2
- 485584134539. 3
- 485584134540. 4

Music

Section Id :

485584863

Section Number :

2

Section type :	Online
Mandatory or Optional :	Optional
Number of Questions :	25
Number of Questions to be attempted :	20
Section Marks :	100
Enable Mark as Answered Mark for Review and Clear Response :	Yes
Maximum Instruction Time :	0
Sub-Section Number :	1
Sub-Section Id :	4855842438
Question Shuffling Allowed :	Yes
Is Section Default? :	null

Question Number : 321 Question Id : 48558433636 Question Type : MCQ Option Shuffling : No Is Question Mandatory : No Calculator : None Response Time : N.A Think Time : N.A Minimum Instruction Time : 0

Correct Marks : 5 Wrong Marks : 1

Question Key Details :

Key	Value
Comprehension	MCQ1

Writer of our National Anthem -

1. Bankim Chandra Chatterjee
2. Mohammad Iqbal
3. Rabindranath Tagore
4. V. N. Bhatkhande

Options :

485584134541. 1
 485584134542. 2
 485584134543. 3
 485584134544. 4

Question Number : 322 Question Id : 48558433637 Question Type : MCQ Option Shuffling : No Is Question Mandatory : No Calculator : None Response Time : N.A Think Time : N.A Minimum Instruction Time : 0

Correct Marks : 5 Wrong Marks : 1

Question Key Details :

Key	Value
Comprehension	MCQ1

While singing Raga Malkauns, the first string of the Tanpura is tuned in:

1. Nishad
2. Madhyam
3. Shadaj
4. Pancham

Options :

485584134545. 1
 485584134546. 2

485584134547. 3

485584134548. 4

Question Number : 323 Question Id : 48558433638 Question Type : MCQ Option Shuffling : No Is Question Mandatory : No Calculator : None Response Time : N.A Think Time : N.A Minimum Instruction Time : 0

Correct Marks : 5 Wrong Marks : 1

Question Key Details :

Key	Value
Comprehension	MCQ1

Kramik Pustak Malika is written by

1. Pt. V. D. Paluskar
2. Pt. Omkar Nath Thakur
3. Ravindranath Tagore
4. Pt. V. N. Bhatkhande

Options :

485584134549. 1
485584134550. 2
485584134551. 3
485584134552. 4

Question Number : 324 Question Id : 48558433639 Question Type : MCQ Option Shuffling : No Is Question Mandatory : No Calculator : None Response Time : N.A Think Time : N.A Minimum Instruction Time : 0

Correct Marks : 5 Wrong Marks : 1

Question Key Details :

Key	Value
Comprehension	MCQ1

Shadav - Audav Jati has:

1. 6 Swaras in Aroha and 7 Swaras in Avaroha
2. 6 Swaras in Aroha and 5 Swaras in Avaroha
3. 6 Swaras in Aroha and 6 Swaras in Avaroha
4. 5 Swaras in Aroha and 6 Swaras in Avaroha

Options :

485584134553. 1
485584134554. 2
485584134555. 3
485584134556. 4

Question Number : 325 Question Id : 48558433640 Question Type : MCQ Option Shuffling : No Is Question Mandatory : No Calculator : None Response Time : N.A Think Time : N.A Minimum Instruction Time : 0

Correct Marks : 5 Wrong Marks : 1

Question Key Details :

Key	Value
Comprehension	MCQ1

It is also called 'Sparsh' Swara :

1. Alankar
2. Vadi
3. Kan
4. Khatka

Options :

485584134557. 1
485584134558. 2
485584134559. 3
485584134560. 4

Question Number : 326 Question Id : 48558433641 Question Type : MCQ Option Shuffling : No Is Question Mandatory : No Calculator : None Response Time : N.A Think Time : N.A Minimum Instruction Time : 0

Correct Marks : 5 Wrong Marks : 1

Question Key Details :

Key	Value
Comprehension	MCQ1

The first beat (Matra) of the Tala is called:

1. Khali
2. Avartan
3. Tali
4. Sam

Options :

485584134561. 1
485584134562. 2
485584134563. 3
485584134564. 4

Question Number : 327 Question Id : 48558433642 Question Type : MCQ Option Shuffling : No Is Question Mandatory : No Calculator : None Response Time : N.A Think Time : N.A Minimum Instruction Time : 0

Correct Marks : 5 Wrong Marks : 1

Question Key Details :

Key	Value
Comprehension	MCQ1

A set of notes to identify a Raga is called:

1. Aroha
2. Avaroha
3. Alap
4. Pakad

Options :

- 485584134565. 1
- 485584134566. 2
- 485584134567. 3
- 485584134568. 4

Question Number : 328 Question Id : 48558433643 Question Type : MCQ Option Shuffling : No Is Question Mandatory : No Calculator : None Response Time : N.A Think Time : N.A Minimum Instruction Time : 0

Correct Marks : 5 Wrong Marks : 1

Question Key Details :

Key	Value
Comprehension	MCQ1

Elaboration of notes of a Raga in slow tempo is known as:

1. Gram
2. Murchhana
3. Tana
4. Alap

Options :

- 485584134569. 1
- 485584134570. 2
- 485584134571. 3
- 485584134572. 4

Question Number : 329 Question Id : 48558433644 Question Type : MCQ Option Shuffling : No Is Question Mandatory : No Calculator : None Response Time : N.A Think Time : N.A Minimum Instruction Time : 0

Correct Marks : 5 Wrong Marks : 1

Question Key Details :

Key	Value
Comprehension	MCQ1

Mushtaq Ali Khan belonged to:

1. Jaipur Gharana
2. Senia Gharana
3. Kirana Gharana
4. Agra Gharana

Options :

485584134573. 1
485584134574. 2
485584134575. 3
485584134576. 4

Question Number : 330 Question Id : 48558433645 Question Type : MCQ Option Shuffling : No Is Question Mandatory : No Calculator : None Response Time : N.A Think Time : N.A Minimum Instruction Time : 0

Correct Marks : 5 Wrong Marks : 1

Question Key Details :

Key	Value
Comprehension	MCQ1

Tala played with Maseetkhani Gat is:

1. Ektala
2. Teentala
3. Sooltala
4. Keharwa

Options :

485584134577. 1
485584134578. 2
485584134579. 3
485584134580. 4

Question Number : 331 Question Id : 48558433646 Question Type : MCQ Option Shuffling : No Is Question Mandatory : No Calculator : None Response Time : N.A Think Time : N.A Minimum Instruction Time : 0

Correct Marks : 5 Wrong Marks : 1

Question Key Details :

Key	Value
Comprehension	MCQ1

The first half of the Saptak is called:

1. Uttarang
2. Purvang
3. Aroha
4. Avaroha

Options :

485584134581. 1
485584134582. 2
485584134583. 3
485584134584. 4

Question Number : 332 Question Id : 48558433647 Question Type : MCQ Option Shuffling : No Is Question Mandatory : No Calculator : None Response Time : N.A Think Time : N.A Minimum Instruction Time : 0

Correct Marks : 5 Wrong Marks : 1

Question Key Details :

Key	Value
Comprehension	MCQ1

Mention the tala with anga's Drutam + Laghu

1. Adi tala
2. Roopaka tala
3. Chapu tala
4. Tripata tala

Options :

485584134585. 1
485584134586. 2
485584134587. 3
485584134588. 4

Question Number : 333 Question Id : 48558433648 Question Type : MCQ Option Shuffling : No Is Question Mandatory : No Calculator : None Response Time : N.A Think Time : N.A Minimum Instruction Time : 0

Correct Marks : 5 Wrong Marks : 1

Question Key Details :

Key	Value
Comprehension	MCQ1

Laya of Musical composition in fast tempo is known as:

1. Sama laya
2. Drut laya
3. Vilambit laya
4. Madhya laya

Options :

485584134589. 1
485584134590. 2
485584134591. 3
485584134592. 4

Question Number : 334 Question Id : 48558433649 Question Type : MCQ Option Shuffling : No Is Question Mandatory : No Calculator : None Response Time : N.A Think Time : N.A Minimum Instruction Time : 0

Correct Marks : 5 Wrong Marks : 1

Question Key Details :

Key	Value
Comprehension	MCQ1

What is the original name of Purandaradas?

1. Venkatesa
2. Shreenivasa
3. Sreedhara
4. Vasudeva

Options :

485584134593. 1
485584134594. 2
485584134595. 3
485584134596. 4

Question Number : 335 Question Id : 48558433650 Question Type : MCQ Option Shuffling : No Is Question Mandatory : No Calculator : None Response Time : N.A Think Time : N.A Minimum Instruction Time : 0

Correct Marks : 5 Wrong Marks : 1

Question Key Details :

Key	Value
Comprehension	MCQ1

Select the tala which has 7 Aksharakalas/Matra

1. Roopakam / Dadra
2. Adi Tala / Teental
3. Chaputala / Roopak
4. Jhampa Tala / Jhaptal

Options :

485584134597. 1
485584134598. 2
485584134599. 3
485584134600. 4

Question Number : 336 Question Id : 48558433651 Question Type : MCQ Option Shuffling : No Is Question Mandatory : No Calculator : None Response Time : N.A Think Time : N.A Minimum Instruction Time : 0

Correct Marks : 5 Wrong Marks : 1

Question Key Details :

Key	Value
Comprehension	MCQ1

Select the Audava raga from the following:

1. Shankarabharanam
2. Kalyani
3. Sri Ranjani
4. Hindolam

Options :

485584134601. 1
485584134602. 2
485584134603. 3
485584134604. 4

Question Number : 337 Question Id : 48558433652 Question Type : MCQ Option Shuffling : No Is Question Mandatory : No Calculator : None Response Time : N.A Think Time : N.A Minimum Instruction Time : 0

Correct Marks : 5 Wrong Marks : 1

Question Key Details :

Key	Value
Comprehension	MCQ1

The sound emanating from the stringed instruments is known as:

1. Shareeraja
2. Lohaja
3. Charmaja
4. Vayuja

Options :

485584134605. 1
485584134606. 2
485584134607. 3
485584134608. 4

Question Number : 338 Question Id : 48558433653 Question Type : MCQ Option Shuffling : No Is Question Mandatory : No Calculator : None Response Time : N.A Think Time : N.A Minimum Instruction Time : 0

Correct Marks : 5 Wrong Marks : 1

Question Key Details :

Key	Value
Comprehension	MCQ1

A musical form which needs high creative ability:

1. Kriti
2. Padam
3. Pallavi
4. Tillana

Options :

485584134609. 1
485584134610. 2
485584134611. 3
485584134612. 4

Question Number : 339 Question Id : 48558433654 Question Type : MCQ Option Shuffling : No Is Question Mandatory : No Calculator : None Response Time : N.A Think Time : N.A Minimum Instruction Time : 0

Correct Marks : 5 Wrong Marks : 1

Question Key Details :

Key	Value
Comprehension	MCQ1

Sa Re Ga Ma Pa Dha Ni swaras belong to:

1. Bhairavi Thata
2. Kafi Thata
3. Asavari Thata
4. Khamaj Thata

Options :

485584134613. 1
485584134614. 2
485584134615. 3
485584134616. 4

Question Number : 340 Question Id : 48558433655 Question Type : MCQ Option Shuffling : No Is Question Mandatory : No Calculator : None Response Time : N.A Think Time : N.A Minimum Instruction Time : 0

Correct Marks : 5 Wrong Marks : 1

Question Key Details :

Key	Value
Comprehension	MCQ1

Select two 'THATA' / MELA from the following:

- A. Kalyan / Kalyani
- B. Malkauns / Hindolam
- C. Bhupali / Mohanam
- D. Bhairav / Mayamalavganla
- E. Bageshree / Sriranjani

Choose the correct answer from the options given below:

1. A and B only
2. B and C only
3. A and D only
4. B and E only

Options :

485584134617. 1
485584134618. 2
485584134619. 3
485584134620. 4

Question Number : 341 Question Id : 48558433656 Question Type : MCQ Option Shuffling : No Is Question Mandatory : No Calculator : None Response Time : N.A Think Time : N.A Minimum Instruction Time : 0

Correct Marks : 5 Wrong Marks : 1

Question Key Details :

Key	Value
Comprehension	MCQ1

Three qualities of Nad are:

- A. Swara
- B. Pitch
- C. Intensity
- D. Alankar
- E. Timbre

Choose the correct answer from the options given below:

1. A, B and C only
2. B, C and E only
3. A, D and E only
4. B, C and D only

Options :

- 485584134621. 1
- 485584134622. 2
- 485584134623. 3
- 485584134624. 4

Question Number : 342 Question Id : 48558433657 Question Type : MCQ Option Shuffling : No Is Question Mandatory : No Calculator : None Response Time : N.A Think Time : N.A Minimum Instruction Time : 0

Correct Marks : 5 Wrong Marks : 1

Question Key Details :

Key	Value
Comprehension	MCQ1

Match List I with List II

LIST I		LIST II	
A.	Vilambit Khayal	I.	Tillana
B.	Tarana	II.	Kriti
C.	Thumri	III.	Maseetkhani Gat
D.	Khayal	IV.	Padam

Choose the correct answer from the options given below:

1. A-I, B-III, C-II, D-IV
2. A-II, B-I, C-IV, D-III
3. A-III, B-I, C-IV, D-II
4. A-IV, B-II, C-I, D-III

Options :

- 485584134625. 1
- 485584134626. 2
- 485584134627. 3
- 485584134628. 4

Question Number : 343 Question Id : 48558433658 Question Type : MCQ Option Shuffling : No Is Question Mandatory : No Calculator : None Response Time : N.A Think Time : N.A Minimum Instruction Time : 0

Correct Marks : 5 Wrong Marks : 1

Question Key Details :

Key	Value
Comprehension	MCQ1

Match List I with List II

LIST I		LIST II	
A.	Nada	I.	Avroha
B.	Shruti	II.	Vivadi
C.	Swara	III.	Pramana
D.	Scale	IV.	Ahata

Choose the correct answer from the options given below:

1. A-I, B-II, C-III, D-IV
2. A-II, B-III, C-IV, D-I
3. A-III, B-IV, C-I, D-II
4. A-IV, B-III, C-II, D-I

Options :

485584134629. 1
485584134630. 2
485584134631. 3
485584134632. 4

Question Number : 344 Question Id : 48558433659 Question Type : MCQ Option Shuffling : No Is Question Mandatory : No Calculator : None Response Time : N.A Think Time : N.A Minimum Instruction Time : 0

Correct Marks : 5 Wrong Marks : 1

Question Key Details :

Key	Value
Comprehension	MCQ1

Arrange the Talas according to their ascending order of Matras:

- A. Ektala
- B. Keharwa
- C. Dadra
- D. Jhaptala
- E. Teentala

Choose the correct answer from the options given below:

1. A, B, C, D, E
2. A, C, B, D, E
3. C, B, D, A, E
4. C, B, A, D, E

Options :

- 485584134633. 1
- 485584134634. 2
- 485584134635. 3
- 485584134636. 4

Question Number : 345 Question Id : 48558433660 Question Type : MCQ Option Shuffling : No Is Question Mandatory : No Calculator : None Response Time : N.A Think Time : N.A Minimum Instruction Time : 0

Correct Marks : 5 Wrong Marks : 1

Question Key Details :

Key	Value
Comprehension	MCQ1

Arrange the swaras of Raga Bhupali / Mohanam according to its Avaroha:

- A. Pa
- B. Re
- C. Ga
- D. Dha
- E. Sa

Choose the correct answer from the options given below:

- 1. A, B, C, E, D
- 2. D, A, C, B, E
- 3. E, B, C, A, D
- 4. E, D, A, C, B

Options :

- 485584134637. 1
- 485584134638. 2
- 485584134639. 3
- 485584134640. 4

Dance

Section Id :	485584864
Section Number :	3
Section type :	Online
Mandatory or Optional :	Optional
Number of Questions :	25
Number of Questions to be attempted :	20
Section Marks :	100
Enable Mark as Answered Mark for Review and Clear Response :	Yes
Maximum Instruction Time :	0
Sub-Section Number :	1
Sub-Section Id :	4855842439
Question Shuffling Allowed :	Yes
Is Section Default? :	null

Question Number : 346 Question Id : 48558433661 Question Type : MCQ Option Shuffling : No Is Question Mandatory : No Calculator : None Response Time : N.A Think Time : N.A Minimum Instruction Time : 0

Correct Marks : 5 Wrong Marks : 1

Question Key Details :

Key	Value
Comprehension	MCQ2

"Uddipan" and "Aalamban" are the types of -

1. Vibhav
2. Anubhav
3. Aangik
4. Vachik

Options :

- 485584134641. 1
- 485584134642. 2
- 485584134643. 3
- 485584134644. 4

Question Number : 347 Question Id : 48558433662 Question Type : MCQ Option Shuffling : No Is Question Mandatory : No Calculator : None Response Time : N.A Think Time : N.A Minimum Instruction Time : 0

Correct Marks : 5 Wrong Marks : 1

Question Key Details :

Key	Value
Comprehension	MCQ2

What is the make-up artist's process called who applies cutti or chutti on actor-dancer's face in Kathakali?

1. Kattalan
2. Pitham
3. Chuttikaran
4. Talavattam

Options :

- 485584134645. 1
- 485584134646. 2
- 485584134647. 3
- 485584134648. 4

Question Number : 348 Question Id : 48558433663 Question Type : MCQ Option Shuffling : No Is Question Mandatory : No Calculator : None Response Time : N.A Think Time : N.A Minimum Instruction Time : 0

Correct Marks : 5 Wrong Marks : 1

Question Key Details :

Key	Value
Comprehension	MCQ2

"Abhinaya Chandrika" text is followed by -

1. Manipuri dancers
2. Odissi dancers
3. Kathakali dancers
4. Kathak dancers

Options :

- 485584134649. 1
- 485584134650. 2
- 485584134651. 3
- 485584134652. 4

Question Number : 349 Question Id : 48558433664 Question Type : MCQ Option Shuffling : No Is Question Mandatory : No Calculator : None Response Time : N.A Think Time : N.A Minimum Instruction Time : 0

Correct Marks : 5 Wrong Marks : 1

Question Key Details :

Key	Value
Comprehension	MCQ2

Which among the following is the famous 'couple dancer' of Kuchipudi dance style?

1. Singhajeet Singh and Charu Singh
2. Maulik Shah and Ishira Parekh
3. Raja and Radha Reddy
4. V. P. Dhananjayan and Shanta Dhananjayan

Options :

- 485584134653. 1
- 485584134654. 2
- 485584134655. 3
- 485584134656. 4

Question Number : 350 Question Id : 48558433665 Question Type : MCQ Option Shuffling : No Is Question Mandatory : No Calculator : None Response Time : N.A Think Time : N.A Minimum Instruction Time : 0

Correct Marks : 5 Wrong Marks : 1

Question Key Details :

Key	Value
Comprehension	MCQ2

Who is a Sattriya exponent among the following?

1. Jatin Goswami
2. V. P. Dhananjaya
3. Charan Girdhar Chand
4. Shashdhar Acharya

Options :

485584134657. 1
485584134658. 2
485584134659. 3
485584134660. 4

Question Number : 351 Question Id : 48558433666 Question Type : MCQ Option Shuffling : No Is Question Mandatory : No Calculator : None Response Time : N.A Think Time : N.A Minimum Instruction Time : 0

Correct Marks : 5 Wrong Marks : 1

Question Key Details :

Key	Value
Comprehension	MCQ2

What are head movements called in Abhinayadarpanam?

1. Shirobheda
2. Padabheda
3. Hastabheda
4. Drishtibheda

Options :

485584134661. 1
485584134662. 2
485584134663. 3
485584134664. 4

Question Number : 352 Question Id : 48558433667 Question Type : MCQ Option Shuffling : No Is Question Mandatory : No Calculator : None Response Time : N.A Think Time : N.A Minimum Instruction Time : 0

Correct Marks : 5 Wrong Marks : 1

Question Key Details :

Key	Value
Comprehension	MCQ2

Which is the oldest university with Dance and Music Departments in Gujarat?

1. Benaras Hindu University
2. Rabindra Bharati University
3. The Maharaja Sayajirao university
4. Raja Mansingh Tomar University

Options :

485584134665. 1
485584134666. 2
485584134667. 3
485584134668. 4

Question Number : 353 Question Id : 48558433668 Question Type : MCQ Option Shuffling : No Is Question Mandatory : No Calculator : None Response Time : N.A Think Time : N.A Minimum Instruction Time : 0

Correct Marks : 5 Wrong Marks : 1

Question Key Details :

Key	Value
Comprehension	MCQ2

"Gat" and "Gat Bhaav" are the items of which classical dance form?

1. Kathakali
2. Sattriya
3. Kathak
4. Bharatanatyam

Options :

485584134669. 1
485584134670. 2
485584134671. 3
485584134672. 4

Question Number : 354 Question Id : 48558433669 Question Type : MCQ Option Shuffling : No Is Question Mandatory : No Calculator : None Response Time : N.A Think Time : N.A Minimum Instruction Time : 0

Correct Marks : 5 Wrong Marks : 1

Question Key Details :

Key	Value
Comprehension	MCQ2

What is head gear called in Kathakali aharya?

1. Kalari
2. Sopanam
3. Kiritam
4. Vesham

Options :

485584134673. 1
485584134674. 2
485584134675. 3
485584134676. 4

Question Number : 355 Question Id : 48558433670 Question Type : MCQ Option Shuffling : No Is Question Mandatory : No Calculator : None Response Time : N.A Think Time : N.A Minimum Instruction Time : 0

Correct Marks : 5 Wrong Marks : 1

Question Key Details :

Key	Value
Comprehension	MCQ2

'Geetam Vadyam tatha Nrityam tryam _____ muchyate' indicates:

1. Tandava
2. Nritta
3. Lasya
4. Sangeet

Options :

485584134677. 1
485584134678. 2
485584134679. 3
485584134680. 4

Question Number : 356 Question Id : 48558433671 Question Type : MCQ Option Shuffling : No Is Question Mandatory : No Calculator : None Response Time : N.A Think Time : N.A Minimum Instruction Time : 0

Correct Marks : 5 Wrong Marks : 1

Question Key Details :

Key	Value
Comprehension	MCQ2

What is the stylised representation called according to Natyashastra?

1. Bharati
2. Kaishiki
3. Vrittis
4. Natyadharmi

Options :

485584134681. 1
485584134682. 2
485584134683. 3
485584134684. 4

Question Number : 357 Question Id : 48558433672 Question Type : MCQ Option Shuffling : No Is Question Mandatory : No Calculator : None Response Time : N.A Think Time : N.A Minimum Instruction Time : 0

Correct Marks : 5 Wrong Marks : 1

Question Key Details :

Key	Value
Comprehension	MCQ2

Chandra-Surya-Rakudi are worn by the dancer of :

1. Kathak
2. Bharatanatyam
3. Manipuri
4. Odissi

Options :

485584134685. 1
485584134686. 2
485584134687. 3
485584134688. 4

Question Number : 358 Question Id : 48558433673 Question Type : MCQ Option Shuffling : No Is Question Mandatory : No Calculator : None Response Time : N.A Think Time : N.A Minimum Instruction Time : 0

Correct Marks : 5 Wrong Marks : 1

Question Key Details :

Key	Value
Comprehension	MCQ2

Which abhinaya comprises rendering of text and lyrics according to Bharata?

1. Vachika
2. Angika
3. Aharya
4. Satvika

Options :

485584134689. 1
485584134690. 2
485584134691. 3
485584134692. 4

Question Number : 359 Question Id : 48558433674 Question Type : MCQ Option Shuffling : No Is Question Mandatory : No Calculator : None Response Time : N.A Think Time : N.A Minimum Instruction Time : 0

Correct Marks : 5 Wrong Marks : 1

Question Key Details :

Key	Value
Comprehension	MCQ2

In which dance, performers perform the compositions of Mahant Shankar Dev?

1. Mohiniattam
2. Kathak
3. Sattriya
4. Kuchipudi

Options :

485584134693. 1
485584134694. 2
485584134695. 3
485584134696. 4

Question Number : 360 Question Id : 48558433675 Question Type : MCQ Option Shuffling : No Is Question Mandatory : No Calculator : None Response Time : N.A Think Time : N.A Minimum Instruction Time : 0

Correct Marks : 5 Wrong Marks : 1

Question Key Details :

Key	Value
Comprehension	MCQ2

What is the earthen pot musical instrument called?

1. Ghatam
2. Morsing
3. Nattuva talam
4. Gajje

Options :

485584134697. 1
485584134698. 2
485584134699. 3
485584134700. 4

Question Number : 361 Question Id : 48558433676 Question Type : MCQ Option Shuffling : No Is Question Mandatory : No Calculator : None Response Time : N.A Think Time : N.A Minimum Instruction Time : 0

Correct Marks : 5 Wrong Marks : 1

Question Key Details :

Key	Value
Comprehension	MCQ2

Percussion instruments used in classical dances:

- A. Dholak
- B. Tabla
- C. Mridangam
- D. Dholaki
- E. Khol

Choose the answer from the options given below:

1. A, C, D only
2. A, B, C only
3. A, D, E only
4. B, C, E only

Options :

485584134701. 1
485584134702. 2
485584134703. 3
485584134704. 4

Question Number : 362 Question Id : 48558433677 Question Type : MCQ Option Shuffling : No Is Question Mandatory : No Calculator : None Response Time : N.A Think Time : N.A Minimum Instruction Time : 0

Correct Marks : 5 Wrong Marks : 1

Question Key Details :

Key	Value
Comprehension	MCQ2

Lasya dance is characterised as:

- A. Forceful
- B. Delicate
- C. Graceful
- D. Gentle
- E. Bold

Choose the correct answer from the options given below:

- 1. A, C, E only
- 2. B, C, D only
- 3. B, D, E only
- 4. A, B, D only

Options :

- 485584134705. 1
- 485584134706. 2
- 485584134707. 3
- 485584134708. 4

Question Number : 363 Question Id : 48558433678 Question Type : MCQ Option Shuffling : No Is Question Mandatory : No Calculator : None Response Time : N.A Think Time : N.A Minimum Instruction Time : 0

Correct Marks : 5 Wrong Marks : 1

Question Key Details :

Key	Value
Comprehension	MCQ2

Trace three "Sthayi Bhaav" from the following:

- A. Rati
- B. Nirveda
- C. Krodh
- D. Aalamban
- E. Uddipan

Choose the correct answer from the options given below:

- 1. A, D, E only
- 2. A, B, C only
- 3. C, D, E only
- 4. B, D, E only

Options :

- 485584134709. 1
- 485584134710. 2
- 485584134711. 3

485584134712. 4

Question Number : 364 Question Id : 48558433679 Question Type : MCQ Option Shuffling : No Is Question Mandatory : No Calculator : None Response Time : N.A Think Time : N.A Minimum Instruction Time : 0

Correct Marks : 5 Wrong Marks : 1

Question Key Details :

Key	Value
Comprehension	MCQ2

Choose rasas from the following:

- A. Tandava
- B. Hasya
- C. Beebhatsa
- D. Lasya
- E. Bhayanaka

Choose the correct answer from the options given below:

- 1. A, C, E only
- 2. B, D, E only
- 3. A, C, D only
- 4. B, C, E only

Options :

- 485584134713. 1
- 485584134714. 2
- 485584134715. 3
- 485584134716. 4

Question Number : 365 Question Id : 48558433680 Question Type : MCQ Option Shuffling : No Is Question Mandatory : No Calculator : None Response Time : N.A Think Time : N.A Minimum Instruction Time : 0

Correct Marks : 5 Wrong Marks : 1

Question Key Details :

Key	Value
Comprehension	MCQ2

Which two are not "Rasa" from among the following?

- A. Aashcharya
- B. Adbhut
- C. Nirveda
- D. Karuna
- E. Roudra

Choose the correct answer from the options given below:

- 1. A and C only
- 2. A and D only
- 3. B and D only
- 4. A and E only

Options :

- 485584134717. 1
- 485584134718. 2
- 485584134719. 3
- 485584134720. 4

Question Number : 366 Question Id : 48558433681 Question Type : MCQ Option Shuffling : No Is Question Mandatory : No Calculator : None Response Time : N.A Think Time : N.A Minimum Instruction Time : 0

Correct Marks : 5 Wrong Marks : 1

Question Key Details :

Key	Value
Comprehension	MCQ2

Match List I with List II

LIST I		LIST II	
A.	Haas	I.	Veer
B.	Utsah	II.	Hasya
C.	Rati	III.	Karun
D.	Shoka	IV.	Shringar

Choose the correct answer from the options given below:

- 1. A-I, B-II, C-III, D-IV
- 2. A-II, B-III, C-I, D-IV
- 3. A-II, B-I, C-IV, D-III
- 4. A-IV, B-III, C-II, D-I

Options :

- 485584134721. 1
- 485584134722. 2
- 485584134723. 3
- 485584134724. 4

Question Number : 367 Question Id : 48558433682 Question Type : MCQ Option Shuffling : No Is Question Mandatory : No Calculator : None Response Time : N.A Think Time : N.A Minimum Instruction Time : 0

Correct Marks : 5 Wrong Marks : 1

Question Key Details :

Key	Value
Comprehension	MCQ2

Match List I with List II

LIST I		LIST II	
A.	Alarippu	I.	Kathak
B.	Pallavi	II.	Odissi
C.	Jiva	III.	Bharatanatyam
D.	Tarana	IV.	Mohiniattam

Choose the correct answer from the options given below:

1. A-III, B-II, C-IV, D-I
2. A-II, B-I, C-III, D-IV
3. A-IV, B-III, C-II, D-I
4. A-I, B-III, C-II, D-IV

Options :

485584134725. 1
485584134726. 2
485584134727. 3
485584134728. 4

Question Number : 368 Question Id : 48558433683 Question Type : MCQ Option Shuffling : No Is Question Mandatory : No Calculator : None Response Time : N.A Think Time : N.A Minimum Instruction Time : 0

Correct Marks : 5 Wrong Marks : 1

Question Key Details :

Key	Value
Comprehension	MCQ2

Match List I with List II

LIST I		LIST II	
A.	Cause - Determinants	I.	Vyabhichari bhava
B.	Consequences-reactions	II.	Rasa
C.	Complementary expression	III.	Vibhava
D.	Sentiment	IV.	Anubhava

Choose the correct answer from the options given below:

1. A-II, B-I, C-III, D-IV
2. A-III, B-IV, C-I, D-II
3. A-IV, B-II, C-III, D-I
4. A-I, B-III, C-II, D-IV

Options :

- 485584134729. 1
- 485584134730. 2
- 485584134731. 3
- 485584134732. 4

Question Number : 369 Question Id : 48558433684 Question Type : MCQ Option Shuffling : No Is Question Mandatory : No Calculator : None Response Time : N.A Think Time : N.A Minimum Instruction Time : 0

Correct Marks : 5 Wrong Marks : 1

Question Key Details :

Key	Value
Comprehension	MCQ2

Match List I with List II

LIST I		LIST II	
A.	Odiyanam	I.	ear ornament
B.	Chandra-Surya	II.	three round balls attached to hair
C.	Kunjalam	III.	head ornament
D.	Jhumiki	IV.	belt

Choose the correct answer from the options given below:

1. A-II, B-I, C-III, D-IV
2. A-III, B-IV, C-I, D-II
3. A-I, B-IV, C-III, D-II
4. A-IV, B-III, C-II, D-I

Options :

- 485584134733. 1
- 485584134734. 2
- 485584134735. 3
- 485584134736. 4

Question Number : 370 Question Id : 48558433685 Question Type : MCQ Option Shuffling : No Is Question Mandatory : No Calculator : None Response Time : N.A Think Time : N.A Minimum Instruction Time : 0

Correct Marks : 5 Wrong Marks : 1

Question Key Details :

Key	Value
Comprehension	MCQ2

Give the correct order of the following rasas according to Natyashastra:

- A. Raudra
- B. Hasya
- C. Veera
- D. Shringara
- E. Karuna

Choose the correct answer from the options given below:

- 1. B, A, E, D, C
- 2. D, C, A, E, B
- 3. A, C, E, B, D
- 4. D, B, E, A, C

Options :

- 485584134737. 1
- 485584134738. 2
- 485584134739. 3
- 485584134740. 4

Percussion Music

Section Id :	485584865
Section Number :	4
Section type :	Online
Mandatory or Optional :	Optional
Number of Questions :	25
Number of Questions to be attempted :	20
Section Marks :	100
Enable Mark as Answered Mark for Review and Clear Response :	Yes
Maximum Instruction Time :	0
Sub-Section Number :	1
Sub-Section Id :	4855842440
Question Shuffling Allowed :	Yes
Is Section Default? :	null

Question Number : 371 Question Id : 48558433686 Question Type : MCQ Option Shuffling : No Is Question Mandatory : No Calculator : None Response Time : N.A Think Time : N.A Minimum Instruction Time : 0

Correct Marks : 5 Wrong Marks : 1

Question Key Details :

Key	Value
Comprehension	MCQ3

Zakir Hussain belongs to which of the following Tabla gharanas?

1. Punjab
2. Delhi
3. Ajrada
4. Lucknow

Options :

485584134741. 1
485584134742. 2
485584134743. 3
485584134744. 4

Question Number : 372 Question Id : 48558433687 Question Type : MCQ Option Shuffling : No Is Question Mandatory : No Calculator : None Response Time : N.A Think Time : N.A Minimum Instruction Time : 0

Correct Marks : 5 Wrong Marks : 1

Question Key Details :

Key	Value
Comprehension	MCQ3

Identify the Tala - Dha Ge Na Ti

1. Dadra
2. Rupak
3. Kaharwa
4. Sooltala

Options :

485584134745. 1
485584134746. 2
485584134747. 3
485584134748. 4

Question Number : 373 Question Id : 48558433688 Question Type : MCQ Option Shuffling : No Is Question Mandatory : No Calculator : None Response Time : N.A Think Time : N.A Minimum Instruction Time : 0

Correct Marks : 5 Wrong Marks : 1

Question Key Details :

Key	Value
Comprehension	MCQ3

In Natyashastra, which instruments (Vadya) are found similar to Pakhawaj?

1. Ankik
2. Urdhwak
3. Aalingya
4. Jodi

Options :

485584134749. 1
485584134750. 2
485584134751. 3
485584134752. 4

Question Number : 374 Question Id : 48558433689 Question Type : MCQ Option Shuffling : No Is Question Mandatory : No Calculator : None Response Time : N.A Think Time : N.A Minimum Instruction Time : 0

Correct Marks : 5 Wrong Marks : 1

Question Key Details :

Key	Value
Comprehension	MCQ3

Jhump Tal accompanies which form of music?

1. Hindustani
2. Karnatak
3. Punjabi
4. Hariyanwi

Options :

485584134753. 1
485584134754. 2
485584134755. 3
485584134756. 4

Question Number : 375 Question Id : 48558433690 Question Type : MCQ Option Shuffling : No Is Question Mandatory : No Calculator : None Response Time : N.A Think Time : N.A Minimum Instruction Time : 0

Correct Marks : 5 Wrong Marks : 1

Question Key Details :

Key	Value
Comprehension	MCQ3

Which Tala is accompanied with Dhrupad?

1. Teen Tala
2. Jhump Tala
3. Sooltala
4. Ektala

Options :

485584134757. 1
485584134758. 2
485584134759. 3
485584134760. 4

Question Number : 376 Question Id : 48558433691 Question Type : MCQ Option Shuffling : No Is Question Mandatory : No Calculator : None Response Time : N.A Think Time : N.A Minimum Instruction Time : 0

Correct Marks : 5 Wrong Marks : 1

Question Key Details :

Key	Value
Comprehension	MCQ3

Which Tala is played with Bhajan?

1. Kaharwa
2. Rudra
3. Lilawati
4. Vishnu

Options :

485584134761. 1
485584134762. 2
485584134763. 3
485584134764. 4

Question Number : 377 Question Id : 48558433692 Question Type : MCQ Option Shuffling : No Is Question Mandatory : No Calculator : None Response Time : N.A Think Time : N.A Minimum Instruction Time : 0

Correct Marks : 5 Wrong Marks : 1

Question Key Details :

Key	Value
Comprehension	MCQ3

Who was the founder of Delhi Gharana?

1. Modu Khan
2. Kallu Khan
3. Siddhar Khan
4. Hasan Khan

Options :

485584134765. 1
485584134766. 2
485584134767. 3
485584134768. 4

Question Number : 378 Question Id : 48558433693 Question Type : MCQ Option Shuffling : No Is Question Mandatory : No Calculator : None Response Time : N.A Think Time : N.A Minimum Instruction Time : 0

Correct Marks : 5 Wrong Marks : 1

Question Key Details :

Key	Value
Comprehension	MCQ3

Mridangam is made from the wood of :

1. Aam (Mango)
2. Shisham
3. Jamun
4. Kathal (Jackfruit)

Options :

485584134769. 1
485584134770. 2
485584134771. 3
485584134772. 4

Question Number : 379 Question Id : 48558433694 Question Type : MCQ Option Shuffling : No Is Question Mandatory : No Calculator : None Response Time : N.A Think Time : N.A Minimum Instruction Time : 0

Correct Marks : 5 Wrong Marks : 1

Question Key Details :

Key	Value
Comprehension	MCQ3

How many 'Gullis' are used in Pakhawaj?

1. 6
2. 8
3. 10
4. 12

Options :

485584134773. 1
485584134774. 2
485584134775. 3
485584134776. 4

Question Number : 380 Question Id : 48558433695 Question Type : MCQ Option Shuffling : No Is Question Mandatory : No Calculator : None Response Time : N.A Think Time : N.A Minimum Instruction Time : 0

Correct Marks : 5 Wrong Marks : 1

Question Key Details :

Key	Value
Comprehension	MCQ3

Kudau Singh is related to which musical instrument (Vadya)?

1. Tabla
2. Pakhawaj
3. Mridangam
4. Punga

Options :

485584134777. 1
485584134778. 2
485584134779. 3
485584134780. 4

Question Number : 381 Question Id : 48558433696 Question Type : MCQ Option Shuffling : No Is Question Mandatory : No Calculator : None Response Time : N.A Think Time : N.A Minimum Instruction Time : 0

Correct Marks : 5 Wrong Marks : 1

Question Key Details :

Key	Value
Comprehension	MCQ3

Kayada of Ada laya is famous in which Gharana?

1. Delhi
2. Punjab
3. Ajrada
4. Farukhabad

Options :

485584134781. 1
485584134782. 2
485584134783. 3
485584134784. 4

Question Number : 382 Question Id : 48558433697 Question Type : MCQ Option Shuffling : No Is Question Mandatory : No Calculator : None Response Time : N.A Think Time : N.A Minimum Instruction Time : 0

Correct Marks : 5 Wrong Marks : 1

Question Key Details :

Key	Value
Comprehension	MCQ3

'Dha' Varna is related to which instrument (Vadya)?

1. Sitar
2. Sarod
3. Pakhawaj
4. Violin

Options :

485584134785. 1
485584134786. 2
485584134787. 3
485584134788. 4

Question Number : 383 Question Id : 48558433698 Question Type : MCQ Option Shuffling : No Is Question Mandatory : No Calculator : None Response Time : N.A Think Time : N.A Minimum Instruction Time : 0

Correct Marks : 5 Wrong Marks : 1

Question Key Details :

Key	Value
Comprehension	MCQ3

Ta, Deem, Dom, Nam varnas pertain to which instrument (Vadya)?

1. Pakhawaj
2. Tabla
3. Dholak
4. Mridangam

Options :

485584134789. 1
485584134790. 2
485584134791. 3
485584134792. 4

Question Number : 384 Question Id : 48558433699 Question Type : MCQ Option Shuffling : No Is Question Mandatory : No Calculator : None Response Time : N.A Think Time : N.A Minimum Instruction Time : 0

Correct Marks : 5 Wrong Marks : 1

Question Key Details :

Key	Value
Comprehension	MCQ3

'Pharan' is played on:

1. Khol
2. Tabla
3. Pakhawaj
4. Mridangam

Options :

485584134793. 1
485584134794. 2
485584134795. 3
485584134796. 4

Question Number : 385 Question Id : 48558433700 Question Type : MCQ Option Shuffling : No Is Question Mandatory : No Calculator : None Response Time : N.A Think Time : N.A Minimum Instruction Time : 0

Correct Marks : 5 Wrong Marks : 1

Question Key Details :

Key	Value
Comprehension	MCQ3

Matras are indicated by the sign -

1. X X X

2. # # #

3. 1 2 3

4. 1 1 1

Options :

485584134797. 1

485584134798. 2

485584134799. 3

485584134800. 4

Question Number : 386 Question Id : 48558433701 Question Type : MCQ Option Shuffling : No Is Question Mandatory : No Calculator : None Response Time : N.A Think Time : N.A Minimum Instruction Time : 0

Correct Marks : 5 Wrong Marks : 1

Question Key Details :

Key	Value
Comprehension	MCQ3

Earmark the laya 'Thah':

1. 1 2 3 4

2. 12 34 56 78

3. 123 456 789 10,11,12

4. 1234 1234 1234 1234

Options :

485584134801. 1

485584134802. 2

485584134803. 3

485584134804. 4

Question Number : 387 Question Id : 48558433702 Question Type : MCQ Option Shuffling : No Is Question Mandatory : No Calculator : None Response Time : N.A Think Time : N.A Minimum Instruction Time : 0

Correct Marks : 5 Wrong Marks : 1

Question Key Details :

Key	Value
Comprehension	MCQ3

Syahi (ink) appearing in the Mridangam bears the color:

1. Green
2. Red
3. Black
4. Yellow

Options :

485584134805. 1
485584134806. 2
485584134807. 3
485584134808. 4

Question Number : 388 Question Id : 48558433703 Question Type : MCQ Option Shuffling : No Is Question Mandatory : No Calculator : None Response Time : N.A Think Time : N.A Minimum Instruction Time : 0

Correct Marks : 5 Wrong Marks : 1

Question Key Details :

Key	Value
Comprehension	MCQ3

Identify the Tala:

Ka, dhe, Te, Dhe Te dhaa S

1. Teentala
2. Chartala
3. Dhamar
4. Jhampatala

Options :

485584134809. 1
485584134810. 2
485584134811. 3
485584134812. 4

Question Number : 389 Question Id : 48558433704 Question Type : MCQ Option Shuffling : No Is Question Mandatory : No Calculator : None Response Time : N.A Think Time : N.A Minimum Instruction Time : 0

Correct Marks : 5 Wrong Marks : 1

Question Key Details :

Key	Value
Comprehension	MCQ3

'Baddhi' of Tabla is made up of:

1. String
2. Leather
3. Metal
4. Iron

Options :

485584134813. 1
485584134814. 2
485584134815. 3
485584134816. 4

Question Number : 390 Question Id : 48558433705 Question Type : MCQ Option Shuffling : No Is Question Mandatory : No Calculator : None Response Time : N.A Think Time : N.A Minimum Instruction Time : 0

Correct Marks : 5 Wrong Marks : 1

Question Key Details :

Key	Value
Comprehension	MCQ3

Match List I with List II

LIST I		LIST II	
Revelations (Bal)		Tala	
A.	Dhi Na Dhi Dhi Na	I.	Teental
B.	Dha Dhin Dhin Dha	II.	Jhaptal
C.	Ti Ti Na	III.	Dadra
D.	Dha Dhi Na	IV.	Rupak

Choose the correct answer from the options given below:

1. A-I, B-III, C-II, D-IV
2. A-III, B-II, C-I, D-IV
3. A-IV, B-III, C-II, D-I
4. A-II, B-I, C-IV, D-III

Options :

485584134817. 1
485584134818. 2
485584134819. 3
485584134820. 4

Question Number : 391 Question Id : 48558433706 Question Type : MCQ Option Shuffling : No Is Question Mandatory : No Calculator : None Response Time : N.A Think Time : N.A Minimum Instruction Time : 0

Correct Marks : 5 Wrong Marks : 1

Question Key Details :

Key	Value
Comprehension	MCQ3

Match List I with List II

LIST I		LIST II	
Bandish		(Instruments) Vadya	
A.	Kayada	I.	Pakhawaj
B.	Stuti Paran	II.	Sitar
C.	Razakhani Gat	III.	Tabla
D.	Aamad	IV.	Kathak

Choose the correct answer from the options given below:

1. A-III, B-I, C-II, D-IV
2. A-II, B-III, C-IV, D-I
3. A-I, B-II, C-III, D-IV
4. A-IV, B-III, C-I, D-II

Options :

485584134821. 1
485584134822. 2
485584134823. 3
485584134824. 4

Question Number : 392 Question Id : 48558433707 Question Type : MCQ Option Shuffling : No Is Question Mandatory : No Calculator : None Response Time : N.A Think Time : N.A Minimum Instruction Time : 0

Correct Marks : 5 Wrong Marks : 1

Question Key Details :

Key	Value
Comprehension	MCQ3

Which among the following are played on Pakhawaj?

- A. Stuti Paran
- B. Tukda
- C. Rela
- D. Kayada
- E. Chakradar

Choose the correct answer from the options given below:

1. A, C and E
2. A, B and D
3. A, D and E
4. A, B and C

Options :

485584134825. 1
485584134826. 2
485584134827. 3
485584134828. 4

Question Number : 393 Question Id : 48558433708 Question Type : MCQ Option Shuffling : No Is Question Mandatory : No Calculator : None Response Time : N.A Think Time : N.A Minimum Instruction Time : 0

Correct Marks : 5 Wrong Marks : 1

Question Key Details :

Key	Value
Comprehension	MCQ3

Select correct sequence of Tabla Players on the basis of their seniority.

- A. Kishan Maharaj
- B. Zakir Hussain
- C. Chotey Lal Mishra
- D. Ramji Mishra
- E. Ram Kumar Mishra

Choose the correct answer from the options given below:

- 1. A, C, D, B, E
- 2. A, B, C, D, E
- 3. A, D, E, C, B
- 4. A, E, D, C, B

Options :

- 485584134829. 1
- 485584134830. 2
- 485584134831. 3
- 485584134832. 4

Question Number : 394 Question Id : 48558433709 Question Type : MCQ Option Shuffling : No Is Question Mandatory : No Calculator : None Response Time : N.A Think Time : N.A Minimum Instruction Time : 0

Correct Marks : 5 Wrong Marks : 1

Question Key Details :

Key	Value
Comprehension	MCQ3

Which instruments (Vadya) are played during 'Bhajan' singing?

- A. Tabla
- B. Surbahar
- C. Pakhawaj
- D. Drum
- E. Harmonium

Choose the correct answer from the options given below:

- 1. A, B and C
- 2. A, C and E
- 3. A, D and B
- 4. B, D and E

Options :

- 485584134833. 1
- 485584134834. 2
- 485584134835. 3
- 485584134836. 4

Question Number : 395 Question Id : 48558433710 Question Type : MCQ Option Shuffling : No Is Question Mandatory : No Calculator : None Response Time : N.A Think Time : N.A Minimum Instruction Time : 0

Correct Marks : 5 Wrong Marks : 1

Question Key Details :

Key	Value
Comprehension	MCQ3

Which of the following are Tabla Gharanas?

- A. Delhi
- B. Culcutta
- C. Ajrada
- D. Jaipur
- E. Farukhabad

Choose the correct answer from the options given below:

- 1. A, B and D
- 2. A, D and E
- 3. A, C and E
- 4. A, E and C

Options :

- 485584134837. 1
- 485584134838. 2
- 485584134839. 3
- 485584134840. 4

Drama And Theatre

Section Id :	485584866
Section Number :	5
Section type :	Online
Mandatory or Optional :	Optional
Number of Questions :	25
Number of Questions to be attempted :	20
Section Marks :	100
Enable Mark as Answered Mark for Review and Clear Response :	Yes
Maximum Instruction Time :	0
Sub-Section Number :	1
Sub-Section Id :	4855842441
Question Shuffling Allowed :	Yes
Is Section Default? :	null

Question Number : 396 Question Id : 48558433711 Question Type : MCQ Option Shuffling : No Is Question Mandatory : No Calculator : None Response Time : N.A Think Time : N.A Minimum Instruction Time : 0

Correct Marks : 5 Wrong Marks : 1

Question Key Details :

Key	Value
Comprehension	MCQ4

In which sanskrit drama of Bhasa the curse of Parshurama plays an important role?

1. Madhyama Vyayoga
2. Karnabharam
3. Urubhangam
4. Dutavakyam

Options :

485584134841. 1
485584134842. 2
485584134843. 3
485584134844. 4

Question Number : 397 Question Id : 48558433712 Question Type : MCQ Option Shuffling : No Is Question Mandatory : No Calculator : None Response Time : N.A Think Time : N.A Minimum Instruction Time : 0

Correct Marks : 5 Wrong Marks : 1

Question Key Details :

Key	Value
Comprehension	MCQ4

In which sanskrit drama Charudatta and Vasantsena appears as Nayaka and Nayika?

1. Svapna Vasavadattam
2. Mahaveer Charitam
3. Mricchakatikam
4. Abhijnanshakuntalam

Options :

485584134845. 1
485584134846. 2
485584134847. 3
485584134848. 4

Question Number : 398 Question Id : 48558433713 Question Type : MCQ Option Shuffling : No Is Question Mandatory : No Calculator : None Response Time : N.A Think Time : N.A Minimum Instruction Time : 0

Correct Marks : 5 Wrong Marks : 1

Question Key Details :

Key	Value
Comprehension	MCQ4

The traditional Theatre Form created by the great religious thinker and reformer Shankardeva of Assam is known as:

1. Ankia Nat
2. Rasaleela
3. Krishnattam
4. Chhau

Options :

485584134849. 1
485584134850. 2
485584134851. 3
485584134852. 4

Question Number : 399 Question Id : 48558433714 Question Type : MCQ Option Shuffling : No Is Question Mandatory : No Calculator : None Response Time : N.A Think Time : N.A Minimum Instruction Time : 0

Correct Marks : 5 Wrong Marks : 1

Question Key Details :

Key	Value
Comprehension	MCQ4

'Jokumarswami', the famous Kannada play is written by -

1. Girish Karnad
2. Adya Rangacharya
3. Chandrasekhar Kambar
4. H. S. Shivaprakash

Options :

485584134853. 1
485584134854. 2
485584134855. 3
485584134856. 4

Question Number : 400 Question Id : 48558433715 Question Type : MCQ Option Shuffling : No Is Question Mandatory : No Calculator : None Response Time : N.A Think Time : N.A Minimum Instruction Time : 0

Correct Marks : 5 Wrong Marks : 1

Question Key Details :

Key	Value
Comprehension	MCQ4

The famous Hindi play 'Adhe Adhure' which depicts the crisis of values faced by the middle class family, is written by:

1. Mohan Rakesh
2. Surendra Varma
3. Shankar Shesh
4. Mani Madhukar

Options :

485584134857. 1
485584134858. 2
485584134859. 3
485584134860. 4

Question Number : 401 Question Id : 48558433716 Question Type : MCQ Option Shuffling : No Is Question Mandatory : No Calculator : None Response Time : N.A Think Time : N.A Minimum Instruction Time : 0

Correct Marks : 5 Wrong Marks : 1

Question Key Details :

Key	Value
Comprehension	MCQ4

The Director who is famous for directing Mahakavi Bhasa plays :

1. Jabbar Patel
2. K. N. Pannikar
3. Pravin Joshi
4. Rajendar Nath

Options :

485584134861. 1
485584134862. 2
485584134863. 3
485584134864. 4

Question Number : 402 Question Id : 48558433717 Question Type : MCQ Option Shuffling : No Is Question Mandatory : No Calculator : None Response Time : N.A Think Time : N.A Minimum Instruction Time : 0

Correct Marks : 5 Wrong Marks : 1

Question Key Details :

Key	Value
Comprehension	MCQ4

'Hypokrites' is a Greek word meaning:

1. Actor
2. Director
3. Producer
4. Playwright

Options :

485584134865. 1
485584134866. 2
485584134867. 3
485584134868. 4

Question Number : 403 Question Id : 48558433718 Question Type : MCQ Option Shuffling : No Is Question Mandatory : No Calculator : None Response Time : N.A Think Time : N.A Minimum Instruction Time : 0

Correct Marks : 5 Wrong Marks : 1

Question Key Details :

Key	Value
Comprehension	MCQ4

The only surviving Greek Trilogy is 'Aeschylus' -

1. The Persians
2. The Orestia
3. Agamemnon
4. The Eumenides

Options :

- 485584134869. 1
- 485584134870. 2
- 485584134871. 3
- 485584134872. 4

Question Number : 404 Question Id : 48558433719 Question Type : MCQ Option Shuffling : No Is Question Mandatory : No Calculator : None Response Time : N.A Think Time : N.A Minimum Instruction Time : 0

Correct Marks : 5 Wrong Marks : 1

Question Key Details :

Key	Value
Comprehension	MCQ4

Who among the following is NOT an acclaimed Shakespearean actor?

1. Charles Kean
2. Henry Irving
3. James Burbage
4. Laurence Olivier

Options :

- 485584134873. 1
- 485584134874. 2
- 485584134875. 3
- 485584134876. 4

Question Number : 405 Question Id : 48558433720 Question Type : MCQ Option Shuffling : No Is Question Mandatory : No Calculator : None Response Time : N.A Think Time : N.A Minimum Instruction Time : 0

Correct Marks : 5 Wrong Marks : 1

Question Key Details :

Key	Value
Comprehension	MCQ4

Which among the following plays is written by Anton Chekhov?

1. The Lower Depths
2. The Lesson
3. The Seagull
4. The Weavers

Options :

- 485584134877. 1
- 485584134878. 2
- 485584134879. 3
- 485584134880. 4

Question Number : 406 Question Id : 48558433721 Question Type : MCQ Option Shuffling : No Is Question Mandatory : No Calculator : None Response Time : N.A Think Time : N.A Minimum Instruction Time : 0

Correct Marks : 5 Wrong Marks : 1

Question Key Details :

Key	Value
Comprehension	MCQ4

Which among the following plays is NOT written by Samuel Beckett?

1. Waiting for Godot
2. Happy days
3. The Birthday Party
4. Endgame

Options :

- 485584134881. 1
- 485584134882. 2
- 485584134883. 3
- 485584134884. 4

Question Number : 407 Question Id : 48558433722 Question Type : MCQ Option Shuffling : No Is Question Mandatory : No Calculator : None Response Time : N.A Think Time : N.A Minimum Instruction Time : 0

Correct Marks : 5 Wrong Marks : 1

Question Key Details :

Key	Value
Comprehension	MCQ4

Meyerhold's contribution to theatre was:

1. Realism
2. Constructivism
3. Alienation
4. Fantastic Realism

Options :

- 485584134885. 1
- 485584134886. 2
- 485584134887. 3
- 485584134888. 4

Question Number : 408 Question Id : 48558433723 Question Type : MCQ Option Shuffling : No Is Question Mandatory : No Calculator : None Response Time : N.A Think Time : N.A Minimum Instruction Time : 0

Correct Marks : 5 Wrong Marks : 1

Question Key Details :

Key	Value
Comprehension	MCQ4

On the Picture Frame stage, the inner proscenium consists of a floor-length side drapes, which are called:

1. Projections
2. Grand draperies
3. Tormentors
4. Teasers

Options :

- 485584134889. 1
- 485584134890. 2
- 485584134891. 3
- 485584134892. 4

Question Number : 409 Question Id : 48558433724 Question Type : MCQ Option Shuffling : No Is Question Mandatory : No Calculator : None Response Time : N.A Think Time : N.A Minimum Instruction Time : 0

Correct Marks : 5 Wrong Marks : 1

Question Key Details :

Key	Value
Comprehension	MCQ4

A fire-retardant curtain that can be lowered to fill the proscenium arch, is called:

1. Front Curtain
2. Asbestos Curtain
3. Back Curtain
4. Cyclorama

Options :

- 485584134893. 1
- 485584134894. 2
- 485584134895. 3
- 485584134896. 4

Question Number : 410 Question Id : 48558433725 Question Type : MCQ Option Shuffling : No Is Question Mandatory : No Calculator : None Response Time : N.A Think Time : N.A Minimum Instruction Time : 0

Correct Marks : 5 Wrong Marks : 1

Question Key Details :

Key	Value
Comprehension	MCQ4

What is used as foundation or base for the rest of the Makeup?

1. Greasepaint
2. Mascara
3. Rouge
4. Powder

Options :

- 485584134897. 1
- 485584134898. 2
- 485584134899. 3
- 485584134900. 4

Question Number : 411 Question Id : 48558433726 Question Type : MCQ Option Shuffling : No Is Question Mandatory : No Calculator : None Response Time : N.A Think Time : N.A Minimum Instruction Time : 0

Correct Marks : 5 Wrong Marks : 1

Question Key Details :

Key	Value
Comprehension	MCQ4

The three plays written by Kalidasa are:

- A. Malvika Agnimitram
- B. Abhijnan Shakuntalam
- C. Svapna Vasavdattam
- D. Vikramorvashiyam
- E. Uttara Ramacharitam

Choose the correct answer from the options given below:

- 1. D, E and B only
- 2. A, B and D only
- 3. B, C and E only
- 4. C, D and A only

Options :

- 485584134901. 1
- 485584134902. 2
- 485584134903. 3
- 485584134904. 4

Question Number : 412 Question Id : 48558433727 Question Type : MCQ Option Shuffling : No Is Question Mandatory : No Calculator : None Response Time : N.A Think Time : N.A Minimum Instruction Time : 0

Correct Marks : 5 Wrong Marks : 1

Question Key Details :

Key	Value
Comprehension	MCQ4

The three famous plays written by Rabindranath Tagore are:

- A. Visarjan
- B. Rajdarshan
- C. Dakghar
- D. Nabanna
- E. Muktheadhara

Choose the correct answer from the options given below:

- 1. D, A and C only
- 2. A, C and E only
- 3. B, D and A only
- 4. C, E and B only

Options :

- 485584134905. 1
- 485584134906. 2
- 485584134907. 3
- 485584134908. 4

Question Number : 413 Question Id : 48558433728 Question Type : MCQ Option Shuffling : No Is Question Mandatory : No Calculator : None Response Time : N.A Think Time : N.A Minimum Instruction Time : 0

Correct Marks : 5 Wrong Marks : 1

Question Key Details :

Key	Value
Comprehension	MCQ4

Identify from the following the three Shakespearean Comedies:

- A. Julius Caesar
- B. The Comedy of Errors
- C. The Two Gentlemen of Verona
- D. The Taming of the Shrew
- E. King Lear

Choose the correct answer from the options given below:

- 1. B, C and D only
- 2. A, B and C only
- 3. C, D and E only
- 4. A, C and E only

Options :

- 485584134909. 1
- 485584134910. 2
- 485584134911. 3
- 485584134912. 4

Question Number : 414 Question Id : 48558433729 Question Type : MCQ Option Shuffling : No Is Question Mandatory : No Calculator : None Response Time : N.A Think Time : N.A Minimum Instruction Time : 0

Correct Marks : 5 Wrong Marks : 1

Question Key Details :

Key	Value
Comprehension	MCQ4

Identify from among the following, the three plays written by Harold Pinter:

- A. Homecoming
- B. The Caretaker
- C. The Chairs
- D. Endgame
- E. The Birthday Party

Choose the correct answer from the options given below:

- 1. A, B and E only
- 2. B, C and A only
- 3. C, D and B only
- 4. D, E and A only

Options :

- 485584134913. 1
- 485584134914. 2
- 485584134915. 3
- 485584134916. 4

Question Number : 415 Question Id : 48558433730 Question Type : MCQ Option Shuffling : No Is Question Mandatory : No Calculator : None Response Time : N.A Think Time : N.A Minimum Instruction Time : 0

Correct Marks : 5 Wrong Marks : 1

Question Key Details :

Key	Value
Comprehension	MCQ4

Lee Strasberg was associated with which three of the following?

- A. Berliner Ensemble
- B. Royal Shakespeare Company
- C. Theatre Guild
- D. Group Theatre
- E. Actors' Studio

Choose the correct answer from the options given below:

- 1. A, B and D only
- 2. C, D and E only
- 3. B, C and D only
- 4. A, C and E only

Options :

- 485584134917. 1
- 485584134918. 2
- 485584134919. 3
- 485584134920. 4

Question Number : 416 Question Id : 48558433731 Question Type : MCQ Option Shuffling : No Is Question Mandatory : No Calculator : None Response Time : N.A Think Time : N.A Minimum Instruction Time : 0

Correct Marks : 5 Wrong Marks : 1

Question Key Details :

Key	Value
Comprehension	MCQ4

Match List I with List II

LIST I		LIST II	
A.	Kalidasa	I.	Svapna Vasavadattam
B.	Bhavabhuti	II.	Mricchakatikam
C.	Shudraka	III.	Abhijnan Shakuntalam
D.	Bhasa	IV.	Uttara Ramacharitam

Choose the correct answer from the options given below:

1. A-I, B-II, C-IV, D-III
2. A-II, B-III, C-I, D-IV
3. A-III, B-IV, C-II, D-I
4. A-IV, B-I, C-III, D-II

Options :

485584134921. 1
485584134922. 2
485584134923. 3
485584134924. 4

Question Number : 417 Question Id : 48558433732 Question Type : MCQ Option Shuffling : No Is Question Mandatory : No Calculator : None Response Time : N.A Think Time : N.A Minimum Instruction Time : 0

Correct Marks : 5 Wrong Marks : 1

Question Key Details :

Key	Value
Comprehension	MCQ4

Match List I with List II

LIST I		LIST II	
A.	Vijaya Mehta	I.	Santu Rangili
B.	Satyadev Dubey	II.	Andha Yug
C.	E. Alkazi	III.	Are Mayavi Sarovar
D.	Pravin Joshi	IV.	Ek Shunya Bajirao

Choose the correct answer from the options given below:

1. A-II, B-I, C-IV, D-III
2. A-III, B-II, C-I, D-IV
3. A-IV, B-III, C-II, D-I
4. A-I, B-IV, C-III, D-II

Options :

485584134925. 1
485584134926. 2
485584134927. 3
485584134928. 4

Question Number : 418 Question Id : 48558433733 Question Type : MCQ Option Shuffling : No Is Question Mandatory : No Calculator : None Response Time : N.A Think Time : N.A Minimum Instruction Time : 0

Correct Marks : 5 Wrong Marks : 1

Question Key Details :

Key	Value
Comprehension	MCQ4

Match List I with List II

LIST I		LIST II	
Plays		Characters	
A.	Julius Caesar	I.	Horatio
B.	Othello	II.	King Duncan
C.	Macbeth	III.	Desdemona
D.	Hamlet	IV.	Marcus Brutus

Choose the correct answer from the options given below:

1. A-IV, B-III, C-II, D-I
2. A-I, B-II, C-III, D-IV
3. A-IV, B-I, C-III, D-II
4. A-II, B-III, C-I, D-IV

Options :

- 485584134929. 1
- 485584134930. 2
- 485584134931. 3
- 485584134932. 4

Question Number : 419 Question Id : 48558433734 Question Type : MCQ Option Shuffling : No Is Question Mandatory : No Calculator : None Response Time : N.A Think Time : N.A Minimum Instruction Time : 0

Correct Marks : 5 Wrong Marks : 1

Question Key Details :

Key	Value
Comprehension	MCQ4

Match List I with List II

LIST I		LIST II	
A.	Ibsen Henrik	I.	The Father
B.	Chekhov Anton	II.	Ghosts
C.	Strindberg August	III.	Death of a Salesman
D.	Arthur Miller	IV.	The Cherry Orchard

Choose the correct answer from the options given below:

1. A-I, B-III, C-IV, D-II
2. A-II, B-IV, C-I, D-III
3. A-III, B-I, C-II, D-IV
4. A-IV, B-II, C-III, D-I

Options :

485584134933. 1
485584134934. 2
485584134935. 3
485584134936. 4

Question Number : 420 Question Id : 48558433735 Question Type : MCQ Option Shuffling : No Is Question Mandatory : No Calculator : None Response Time : N.A Think Time : N.A Minimum Instruction Time : 0

Correct Marks : 5 Wrong Marks : 1

Question Key Details :

Key	Value
Comprehension	MCQ4

Give the correct sequence of the following Traditional Theatre Forms according to their Geographical origin from South to North.

- A. Tamasha
- B. Yakshagana
- C. Bhand Jashna
- D. Kutiyattam
- E. Svanga

Choose the correct answer from the options given below:

1. D, B, A, E, C
2. E, C, B, A, D
3. A, D, C, B, E
4. B, E, D, C, A

Options :

485584134937. 1
485584134938. 2
485584134939. 3
485584134940. 4

Political Science

Group Number :	11
Group Id :	485584749
Group Maximum Duration :	45
Group Minimum Duration :	45
Show Attended Group? :	No
Edit Attended Group? :	No
Break time :	0
Group Marks :	200
Is this Group for Examiner? :	No
Examiner permission :	Cant View
Show Progress Bar? :	No

Political Science

Section Id :	485584867
Section Number :	1
Section type :	Online
Mandatory or Optional :	Mandatory
Number of Questions :	50
Number of Questions to be attempted :	40
Section Marks :	200
Enable Mark as Answered Mark for Review and Clear Response :	Yes
Maximum Instruction Time :	0
Sub-Section Number :	1
Sub-Section Id :	4855842442
Question Shuffling Allowed :	Yes
Is Section Default? :	null

Question Number : 421 Question Id : 48558433736 Question Type : MCQ Option Shuffling : No Is Question Mandatory : No Calculator : None Response Time : N.A Think Time : N.A Minimum Instruction Time : 0 Correct Marks : 5 Wrong Marks : 1

Question Key Details :

Key	Value
Comprehension	MCQ

Prime minister of India addressed a special speech on 14th and 15th August midnight.

It was called:

1. Trust in the Nation
2. Tryst with India
3. Tryst with destiny
4. Independent India

Options :

485584134941. 1
485584134942. 2

485584134943. 3

485584134944. 4

Question Number : 422 Question Id : 48558433737 Question Type : MCQ Option Shuffling : No Is Question Mandatory : No Calculator : None Response Time : N.A Think Time : N.A Minimum Instruction Time : 0

Correct Marks : 5 Wrong Marks : 1

Question Key Details :

Key	Value
Comprehension	MCQ

State requisition Act was passed in which year?

1. 1952

2. 1954

3. 1956

4. 1958

Options :

485584134945. 1

485584134946. 2

485584134947. 3

485584134948. 4

Question Number : 423 Question Id : 48558433738 Question Type : MCQ Option Shuffling : No Is Question Mandatory : No Calculator : None Response Time : N.A Think Time : N.A Minimum Instruction Time : 0

Correct Marks : 5 Wrong Marks : 1

Question Key Details :

Key	Value
Comprehension	MCQ

Given below are two statements: one is labelled as Assertion A and other is labelled as Reason R

Assertion A: Towards the end of 1990's the election commission started using the EVM.

Reason R: By 2004 the entire country had shifted to the EVM. But it was decided to place inside each polling booth a box for each candidate.

In the light of the above statements, choose the correct answer from the options given below

1. Both A and R are true and R is the correct explanation of A

2. Both A and R are true but R is the NOT correct explanation of A

3. A is true but R is not false

4. A is false but R is true

Options :

485584134949. 1

485584134950. 2

485584134951. 3

485584134952. 4

Question Number : 424 Question Id : 48558433739 Question Type : MCQ Option Shuffling : No Is Question Mandatory : No Calculator : None Response Time : N.A Think Time : N.A Minimum Instruction Time : 0

Correct Marks : 5 Wrong Marks : 1

Question Key Details :

Key	Value
Comprehension	MCQ

Match List I with List II

LIST I		LIST II	
A.	Adopted Buddhism in 1956 and the leader of anti-caste movement	I.	PRI
B.	Founded in 1929, as National revolutionary party	II.	Acharya Narendra Dev
C.	Freedom fighter and a scholar of Buddhism	III.	Bhartiya Jan Sangh
D.	In 1951 party was formed with Shyam Prasad Mukherjee	IV.	Babasaheb Bhimrao Ambedkar

Choose the correct answer from the options given below:

1. A-I, B-II, C-III, D-IV
2. A-IV, B-I, C-II, D-III
3. A-III, B-II, C-IV, D-I
4. A-IV, B-III, C-II, D-I

Options :

- 485584134953. 1
- 485584134954. 2
- 485584134955. 3
- 485584134956. 4

Question Number : 425 Question Id : 48558433740 Question Type : MCQ Option Shuffling : No Is Question Mandatory : No Calculator : None Response Time : N.A Think Time : N.A Minimum Instruction Time : 0

Correct Marks : 5 Wrong Marks : 1

Question Key Details :

Key	Value
Comprehension	MCQ

Who was the director of Marathi Film Simhasan?

1. Jabbar Patel
2. Vijay Tendulkar
3. Datta Bhat
4. Mohan Agashe

Options :

- 485584134957. 1
- 485584134958. 2
- 485584134959. 3
- 485584134960. 4

Question Number : 426 Question Id : 48558433741 Question Type : MCQ Option Shuffling : No Is Question Mandatory : No Calculator : None Response Time : N.A Think Time : N.A Minimum Instruction Time : 0

Correct Marks : 5 Wrong Marks : 1

Question Key Details :

Key	Value
Comprehension	MCQ

A section of the big industrialist got together in 1944 and drafted a joint proposal for setting up a planned economy in the country. It was called _____

1. Industries Plan
2. New strategy of business
3. Bombay Plan
4. Revised Plan

Options :

- 485584134961. 1
- 485584134962. 2
- 485584134963. 3
- 485584134964. 4

Question Number : 427 Question Id : 48558433742 Question Type : MCQ Option Shuffling : No Is Question Mandatory : No Calculator : None Response Time : N.A Think Time : N.A Minimum Instruction Time : 0

Correct Marks : 5 Wrong Marks : 1

Question Key Details :

Key	Value
Comprehension	MCQ

NITI Ayog came into existence on which date?

1. 7 January 2015
2. 1 January 2015
3. 10 January 2015
4. 12 January 2015

Options :

- 485584134965. 1
- 485584134966. 2
- 485584134967. 3
- 485584134968. 4

Question Number : 428 Question Id : 48558433743 Question Type : MCQ Option Shuffling : No Is Question Mandatory : No Calculator : None Response Time : N.A Think Time : N.A Minimum Instruction Time : 0

Correct Marks : 5 Wrong Marks : 1

Question Key Details :

Key	Value
Comprehension	MCQ

Given below are two statements:

Statements I: The second five year plan stressed on heavy Industries.

Statements II: It declared that socialist pattern of society was its goal.

In the light of the above statements, choose the most appropriate answer from the options given below:

1. Both statement I and statement II are correct
2. Both statement I and statement II are incorrect
3. Statement I is correct but statement II is incorrect
4. Statement I is incorrect but statement II is correct

Options :

- 485584134969. 1
- 485584134970. 2
- 485584134971. 3
- 485584134972. 4

Question Number : 429 Question Id : 48558433744 Question Type : MCQ Option Shuffling : No Is Question Mandatory : No Calculator : None Response Time : N.A Think Time : N.A Minimum Instruction Time : 0

Correct Marks : 5 Wrong Marks : 1

Question Key Details :

Key	Value
Comprehension	MCQ

Choose the name of the author of 'Economy of Permanence'

1. K. N. Raj
2. P. C. Mahalannobis
3. J. C. Kumarappa
4. Karuna Banergee

Options :

- 485584134973. 1
- 485584134974. 2
- 485584134975. 3
- 485584134976. 4

Question Number : 430 Question Id : 48558433745 Question Type : MCQ Option Shuffling : No Is Question Mandatory : No Calculator : None Response Time : N.A Think Time : N.A Minimum Instruction Time : 0

Correct Marks : 5 Wrong Marks : 1

Question Key Details :

Key	Value
Comprehension	MCQ

In which year Britain attacked Egypt over the Sues Canal issue

1. 1955
2. 1956
3. 1957
4. 1958

Options :

485584134977. 1
485584134978. 2
485584134979. 3
485584134980. 4

Question Number : 431 Question Id : 48558433746 Question Type : MCQ Option Shuffling : No Is Question Mandatory : No Calculator : None Response Time : N.A Think Time : N.A Minimum Instruction Time : 0

Correct Marks : 5 Wrong Marks : 1

Question Key Details :

Key	Value
Comprehension	MCQ

In which Article of Indian constitution lays down some Directive Principles of state Policy on Promotion of International peace and security

1. Article 51
2. Article 50
3. Article 49
4. Article 48

Options :

485584134981. 1
485584134982. 2
485584134983. 3
485584134984. 4

Question Number : 432 Question Id : 48558433747 Question Type : MCQ Option Shuffling : No Is Question Mandatory : No Calculator : None Response Time : N.A Think Time : N.A Minimum Instruction Time : 0

Correct Marks : 5 Wrong Marks : 1

Question Key Details :

Key	Value
Comprehension	MCQ

The first summit of NAM was held in Belgrade in _____

1. January 1961
2. March 1961
3. May 1961
4. September 1961

Options :

- 485584134985. 1
- 485584134986. 2
- 485584134987. 3
- 485584134988. 4

Question Number : 433 Question Id : 48558433748 Question Type : MCQ Option Shuffling : No Is Question Mandatory : No Calculator : None Response Time : N.A Think Time : N.A Minimum Instruction Time : 0

Correct Marks : 5 Wrong Marks : 1

Question Key Details :

Key	Value
Comprehension	MCQ

Frankly-----my impression (of Zhou Enlai) was very favourable _____ the Chinese premier is, I believe a good type of man and trust worthy

Who wrote there words in letter in December 1956

1. C Rajgopalachari
2. Mahatma Gandhi
3. Sardar Patel
4. Jawahar Lal Nehru

Options :

- 485584134989. 1
- 485584134990. 2
- 485584134991. 3
- 485584134992. 4

Question Number : 434 Question Id : 48558433749 Question Type : MCQ Option Shuffling : No Is Question Mandatory : No Calculator : None Response Time : N.A Think Time : N.A Minimum Instruction Time : 0

Correct Marks : 5 Wrong Marks : 1

Question Key Details :

Key	Value
Comprehension	MCQ

The first nuclear explosion undertaken by India in which year

1. 1973
2. 1974
3. 1975
4. 1976

Options :

485584134993. 1
485584134994. 2
485584134995. 3
485584134996. 4

Question Number : 435 Question Id : 48558433750 Question Type : MCQ Option Shuffling : No Is Question Mandatory : No Calculator : None Response Time : N.A Think Time : N.A Minimum Instruction Time : 0

Correct Marks : 5 Wrong Marks : 1

Question Key Details :

Key	Value
Comprehension	MCQ

Match List I with List II

LIST I		LIST II	
A.	The goal of India's Foreign Policy in the period 1950-1964	I.	Tibetan spiritual leader who crossed over to India
B.	Panchsheel	II.	Preservation of territorial integrity sovereignty and economic development
C.	Bandung Conference	III.	Five principles of peaceful co-existence
D.	Dalai Lama	IV.	Led to the establishment of NAM

Choose the correct answer from the options given below:

1. A-I, B-II, C-III, D-IV
2. A-II, B-III, C-IV, D-I
3. A-II, B-IV, C-III, D-I
4. A-I, B-III, C-II, D-IV

Options :

485584134997. 1
485584134998. 2
485584134999. 3
485584135000. 4

Question Number : 436 Question Id : 48558433751 Question Type : MCQ Option Shuffling : No Is Question Mandatory : No Calculator : None Response Time : N.A Think Time : N.A Minimum Instruction Time : 0

Correct Marks : 5 Wrong Marks : 1

Question Key Details :

Key	Value
Comprehension	MCQ

Who coined the famous slogan Jai Jawan Jai Kisan

1. Jawaharlal Nehru
2. Lal Bhadur Shastri
3. Lal Bahadur Lal
4. Mahatma Gandhi

Options :

- 485584135001. 1
- 485584135002. 2
- 485584135003. 3
- 485584135004. 4

Question Number : 437 Question Id : 48558433752 Question Type : MCQ Option Shuffling : No Is Question Mandatory : No Calculator : None Response Time : N.A Think Time : N.A Minimum Instruction Time : 0

Correct Marks : 5 Wrong Marks : 1

Question Key Details :

Key	Value
Comprehension	MCQ

Who introduced mid-day meal scheme for School Children.

1. K. Kamraj
2. K.N. Raj
3. Vinoba Bhave
4. K. Nizilingappa

Options :

- 485584135005. 1
- 485584135006. 2
- 485584135007. 3
- 485584135008. 4

Question Number : 438 Question Id : 48558433753 Question Type : MCQ Option Shuffling : No Is Question Mandatory : No Calculator : None Response Time : N.A Think Time : N.A Minimum Instruction Time : 0

Correct Marks : 5 Wrong Marks : 1

Question Key Details :

Key	Value
Comprehension	MCQ

Choose the name of the President of India from 1969 to 1974

1. Neelam Sanjeeva Reddy
2. V. V. Giri
3. Zakir Hussain
4. Fakhruddin Ali Ahmed

Options :

485584135009. 1
485584135010. 2
485584135011. 3
485584135012. 4

Question Number : 439 Question Id : 48558433754 Question Type : MCQ Option Shuffling : No Is Question Mandatory : No Calculator : None Response Time : N.A Think Time : N.A Minimum Instruction Time : 0

Correct Marks : 5 Wrong Marks : 1

Question Key Details :

Key	Value
Comprehension	MCQ

Who formed DMK as a Political Party in 1949

1. Ram Manohar Lohia
2. C. Natrajan Ananaduri
3. Nevile Maxwell
4. Karpoori Thakur

Options :

485584135013. 1
485584135014. 2
485584135015. 3
485584135016. 4

Question Number : 440 Question Id : 48558433755 Question Type : MCQ Option Shuffling : No Is Question Mandatory : No Calculator : None Response Time : N.A Think Time : N.A Minimum Instruction Time : 0

Correct Marks : 5 Wrong Marks : 1

Question Key Details :

Key	Value
Comprehension	MCQ

'Sampoorna Kranti ab nara hai, bhavi itihias hamara hai'

Above slogan is associated with which movement

1. Anti-Arrack-Movement
2. Bihar Movement
3. Gujrat Movement
4. Chipko Movement

Options :

485584135017. 1
485584135018. 2
485584135019. 3
485584135020. 4

Question Number : 441 Question Id : 48558433756 Question Type : MCQ Option Shuffling : No Is Question Mandatory : No Calculator : None Response Time : N.A Think Time : N.A Minimum Instruction Time : 0

Correct Marks : 5 Wrong Marks : 1

Question Key Details :

Key	Value
Comprehension	MCQ

In May 1977, The Janta Party government appointed which commission, to inquire into several aspects of allegation of abuse of authority.

1. Sheng Commission
2. Shai Commission
3. Shah Commission
4. J.P Commission

Options :

485584135021. 1
485584135022. 2
485584135023. 3
485584135024. 4

Question Number : 442 Question Id : 48558433757 Question Type : MCQ Option Shuffling : No Is Question Mandatory : No Calculator : None Response Time : N.A Think Time : N.A Minimum Instruction Time : 0

Correct Marks : 5 Wrong Marks : 1

Question Key Details :

Key	Value
Comprehension	MCQ

Who were the Deputy Prime Minister of India from 1967 to 1969

1. Devi Lal
2. Charan Singh
3. Jagjivan Ram
4. Morarji Dessai

Options :

485584135025. 1
485584135026. 2
485584135027. 3
485584135028. 4

Question Number : 443 Question Id : 48558433758 Question Type : MCQ Option Shuffling : No Is Question Mandatory : No Calculator : None Response Time : N.A Think Time : N.A Minimum Instruction Time : 0

Correct Marks : 5 Wrong Marks : 1

Question Key Details :

Key	Value
Comprehension	MCQ

Dalit Panthers, a militant organisation of Dalit Youth, was formed in which state in 1972

1. Kerala
2. Maharashtra
3. Bihar
4. West Bengal

Options :

485584135029. 1
485584135030. 2
485584135031. 3
485584135032. 4

Question Number : 444 Question Id : 48558433759 Question Type : MCQ Option Shuffling : No Is Question Mandatory : No Calculator : None Response Time : N.A Think Time : N.A Minimum Instruction Time : 0

Correct Marks : 5 Wrong Marks : 1

Question Key Details :

Key	Value
Comprehension	MCQ

"Our blood was spilled for this glorious city and what we got was the right to eat stories. Now, now we must explode the building that kisses the sky." Who is the author of above poem.

1. Jayant Karve
2. Eleavor Zelliot
3. Namdeo Dahasal
4. Raj Kumari Amrit Kaur

Options :

485584135033. 1
485584135034. 2
485584135035. 3
485584135036. 4

Question Number : 445 Question Id : 48558433760 Question Type : MCQ Option Shuffling : No Is Question Mandatory : No Calculator : None Response Time : N.A Think Time : N.A Minimum Instruction Time : 0

Correct Marks : 5 Wrong Marks : 1

Question Key Details :

Key	Value
Comprehension	MCQ

In which year RTI bill was tabled and received presidential assent.

1. June 2005
2. July 2006
3. June 2007
4. July 2008

Options :

485584135037. 1
485584135038. 2
485584135039. 3
485584135040. 4

Question Number : 446 Question Id : 48558433761 Question Type : MCQ Option Shuffling : No Is Question Mandatory : No Calculator : None Response Time : N.A Think Time : N.A Minimum Instruction Time : 0

Correct Marks : 5 Wrong Marks : 1

Question Key Details :

Key	Value
Comprehension	MCQ

Given below are two statements: one is labelled as **Assertion A** and the other is labelled as **Reason R**

Assertion A : Asom Gana Sangram Parishad organised themselves as a regional political party called Asom Gana Parishad

Reason R : It came to power in 1985 with the promise of resolving the foreign national problem as well as to build a 'Golden Assam'

In the light of the above statements, choose the **correct** answer from the options given below:

1. Both **A** and **R** are true and **R** is the correct explanation of **A**
2. Both **A** and **R** are true and **R** is **NOT** the correct explanation of **A**
3. **A** is true but **R** is false
4. **A** is false but **R** is true

Options :

485584135041. 1

485584135042. 2

485584135043. 3

485584135044. 4

Question Number : 447 Question Id : 48558433762 Question Type : MCQ Option Shuffling : No Is Question Mandatory : No Calculator : None Response Time : N.A Think Time : N.A Minimum Instruction Time : 0

Correct Marks : 5 Wrong Marks : 1

Question Key Details :

Key	Value
Comprehension	MCQ

The bomb dropped by the US on Hiroshima city was code named

1. Fat Man
2. Little Boy
3. Fat Woman
4. Little Girl

Options :

485584135045. 1

485584135046. 2

485584135047. 3

485584135048. 4

Question Number : 448 Question Id : 48558433763 Question Type : MCQ Option Shuffling : No Is Question Mandatory : No Calculator : None Response Time : N.A Think Time : N.A Minimum Instruction Time : 0

Correct Marks : 5 Wrong Marks : 1

Question Key Details :

Key	Value
Comprehension	MCQ

Name the leader who was the first Prime Minister of Ghana and founder figure of NAM.

1. Josip Broz
2. Kwame Nkrumah
3. Kwame Skrumah
4. Gamal Abdel

Options :

- 485584135049. 1
- 485584135050. 2
- 485584135051. 3
- 485584135052. 4

Question Number : 449 Question Id : 48558433764 Question Type : MCQ Option Shuffling : No Is Question Mandatory : No Calculator : None Response Time : N.A Think Time : N.A Minimum Instruction Time : 0

Correct Marks : 5 Wrong Marks : 1

Question Key Details :

Key	Value
Comprehension	MCQ

Name the founder of Bolshevik Communist Party.

1. Joseph Stalin
2. Vladimir Lenin
3. Boris Yeltsin
4. Leonid Brezhnev

Options :

- 485584135053. 1
- 485584135054. 2
- 485584135055. 3
- 485584135056. 4

Question Number : 450 Question Id : 48558433765 Question Type : MCQ Option Shuffling : No Is Question Mandatory : No Calculator : None Response Time : N.A Think Time : N.A Minimum Instruction Time : 0

Correct Marks : 5 Wrong Marks : 1

Question Key Details :

Key	Value
Comprehension	MCQ

Who was the first elected President of Russia?

1. Mikhail Gorbachev
2. Fidel Castro
3. Boris Yeltsin
4. Joseph Stalin

Options :

485584135057. 1
485584135058. 2
485584135059. 3
485584135060. 4

Question Number : 451 Question Id : 48558433766 Question Type : MCQ Option Shuffling : No Is Question Mandatory : No Calculator : None Response Time : N.A Think Time : N.A Minimum Instruction Time : 0

Correct Marks : 5 Wrong Marks : 1

Question Key Details :

Key	Value
Comprehension	MCQ

- A. On 19 March 2003, the US launched its invasion of Iraq.
- B. US has lost over 3000 military personnel in the war
- C. The ostensible purpose of the invasion was to destroy Iraq from developing weapons at mass destruction
- D. More than forty other countries joined in the US led coalition of the willing after the UN refused to give its mandate to the invasion

Choose the most appropriate answer from the options given below:

1. A, C, D only
2. A, B, C only
3. A, B, D only
4. C, D, A only

Options :

485584135061. 1
485584135062. 2
485584135063. 3
485584135064. 4

Question Number : 452 Question Id : 48558433767 Question Type : MCQ Option Shuffling : No Is Question Mandatory : No Calculator : None Response Time : N.A Think Time : N.A Minimum Instruction Time : 0

Correct Marks : 5 Wrong Marks : 1

Question Key Details :

Key	Value
Comprehension	MCQ

In which year the Lisbon Treaty came in to force?

1. 2007
2. 2008
3. 2009
4. 2010

Options :

485584135065. 1
485584135066. 2
485584135067. 3
485584135068. 4

Question Number : 453 Question Id : 48558433768 Question Type : MCQ Option Shuffling : No Is Question Mandatory : No Calculator : None Response Time : N.A Think Time : N.A Minimum Instruction Time : 0

Correct Marks : 5 Wrong Marks : 1

Question Key Details :

Key	Value
Comprehension	MCQ

Bangladesh was a part of Pakistan from_____

1. 1947 to 1971
2. 1947 to 1969
3. 1948 to 1949
4. 1948 to 1969

Options :

485584135069. 1
485584135070. 2
485584135071. 3
485584135072. 4

Question Number : 454 Question Id : 48558433769 Question Type : MCQ Option Shuffling : No Is Question Mandatory : No Calculator : None Response Time : N.A Think Time : N.A Minimum Instruction Time : 0

Correct Marks : 5 Wrong Marks : 1

Question Key Details :

Key	Value
Comprehension	MCQ

In 2008, in which state the monarchy was abolished and emerged as a democratic republic?

1. Bhutan
2. Nepal
3. Bangladesh
4. Maldives

Options :

485584135073. 1
485584135074. 2
485584135075. 3
485584135076. 4

Question Number : 455 Question Id : 48558433770 Question Type : MCQ Option Shuffling : No Is Question Mandatory : No Calculator : None Response Time : N.A Think Time : N.A Minimum Instruction Time : 0

Correct Marks : 5 Wrong Marks : 1

Question Key Details :

Key	Value
Comprehension	MCQ

Name the 9th Secretary-General of UN.

1. Antonio Guterres
2. Ban Ki Moon
3. Kofi A. Annan
4. U. Thart

Options :

485584135077. 1
485584135078. 2
485584135079. 3
485584135080. 4

Question Number : 456 Question Id : 48558433771 Question Type : MCQ Option Shuffling : No Is Question Mandatory : No Calculator : None Response Time : N.A Think Time : N.A Minimum Instruction Time : 0

Correct Marks : 5 Wrong Marks : 1

Question Key Details :

Key	Value
Comprehension	MCQ

The world trade organisation sets the rules for...

1. Global Economy
2. Global Trade
3. Global Future
4. Global Issues

Options :

- 485584135081. 1
- 485584135082. 2
- 485584135083. 3
- 485584135084. 4

Question Number : 457 Question Id : 48558433772 Question Type : MCQ Option Shuffling : No Is Question Mandatory : No Calculator : None Response Time : N.A Think Time : N.A Minimum Instruction Time : 0

Correct Marks : 5 Wrong Marks : 1

Question Key Details :

Key	Value
Comprehension	MCQ

The Nuclear Non Proliferation Treaty of 1968 was an _____

1. Arms control treaty
2. Arms reduction treaty
3. Arms availability treaty
4. Arms for developed country

Options :

- 485584135085. 1
- 485584135086. 2
- 485584135087. 3
- 485584135088. 4

Question Number : 458 Question Id : 48558433773 Question Type : MCQ Option Shuffling : No Is Question Mandatory : No Calculator : None Response Time : N.A Think Time : N.A Minimum Instruction Time : 0

Correct Marks : 5 Wrong Marks : 1

Question Key Details :

Key	Value
Comprehension	MCQ

When was Earth Summit held in Rio-de-Janeiro?

1. June 1991
2. June 1992
3. June 1993
4. June 1994

Options :

485584135089. 1
485584135090. 2
485584135091. 3
485584135092. 4

Question Number : 459 Question Id : 48558433774 Question Type : MCQ Option Shuffling : No Is Question Mandatory : No Calculator : None Response Time : N.A Think Time : N.A Minimum Instruction Time : 0

Correct Marks : 5 Wrong Marks : 1

Question Key Details :

Key	Value
Comprehension	MCQ

India signed and ratified the 1997 Kyoto Protocol in

1. August 2001
2. August 1997
3. August 2003
4. August 2002

Options :

485584135093. 1
485584135094. 2
485584135095. 3
485584135096. 4

Question Number : 460 Question Id : 48558433775 Question Type : MCQ Option Shuffling : No Is Question Mandatory : No Calculator : None Response Time : N.A Think Time : N.A Minimum Instruction Time : 0

Correct Marks : 5 Wrong Marks : 1

Question Key Details :

Key	Value
Comprehension	MCQ

The energy Conservation Act was passed in India in which year?

1. 2000
2. 2001
3. 2002
4. 2003

Options :

485584135097. 1
485584135098. 2
485584135099. 3
485584135100. 4

Sub-Section Number : 2
Sub-Section Id : 4855842443
Question Shuffling Allowed : No
Is Section Default? : null

Question Number : 461 Question Id : 48558433776 Question Type : MCQ Option Shuffling : No Is Question Mandatory : No Calculator : None Response Time : N.A Think Time : N.A Minimum Instruction Time : 0

Correct Marks : 5 Wrong Marks : 1

Question Key Details :

Key	Value
Comprehension	Comp1

Read the paragraph given below and answer the following questions.

Shastri was the country's Prime Minister from 1964-1966. During Shastri's brief Prime Ministership, the country faced two major challenges. While India was still recovering from the economic implications of the war with China, failed monsoons, drought and serious food crisis presented a grave challenge. The country also faced a war with Pakistan in 1965. Shastri's famous slogan 'Jai Jawan Jai Kisan', symbolised the country's resolve to face both these challenges.

Shastri's Prime Ministership came to an abrupt end on 10 January 1966, when he suddenly expired in Tashkent, then in USSR and currently the capital of Uzbekistan. He was there to discuss and sign an agreement with Muhammad Ayub Khan, the then President of Pakistan, to end the war.

Lal Bahadur Shastri's Prime Ministership came to an abrupt end on _____

1. 10 January 1966
2. 10 February 1966
3. 10 January 1964
4. 10 February 1964

Options :

485584135101. 1
485584135102. 2
485584135103. 3
485584135104. 4

Question Number : 462 Question Id : 48558433777 Question Type : MCQ Option Shuffling : No Is Question Mandatory : No Calculator : None Response Time : N.A Think Time : N.A Minimum Instruction Time : 0

Correct Marks : 5 Wrong Marks : 1

Question Key Details :

Key	Value
Comprehension	Comp1

Read the paragraph given below and answer the following questions.

Shastri was the country's Prime Minister from 1964-1966. During Shastri's brief Prime Ministership, the country faced two major challenges. While India was still recovering from the economic implications of the war with China, failed monsoons, drought and serious food crisis presented a grave challenge. The country also faced a war with Pakistan in 1965. Shastri's famous slogan 'Jai Jawan Jai Kisan', symbolised the country's resolve to face both these challenges.

Shastri's Prime Ministership came to an abrupt end on 10 January 1966, when he suddenly expired in Tashkent, then in USSR and currently the capital of Uzbekistan. He was there to discuss and sign an agreement with Muhammad Ayub Khan, the then President of Pakistan, to end the war.

During the Prime Ministership of Lal Bahadur Shastri, India faces a war with

1. China
2. Pakistan
3. Bhutan
4. Sri Lanka

Options :

- 485584135105. 1
- 485584135106. 2
- 485584135107. 3
- 485584135108. 4

Question Number : 463 Question Id : 48558433778 Question Type : MCQ Option Shuffling : No Is Question Mandatory : No Calculator : None Response Time : N.A Think Time : N.A Minimum Instruction Time : 0

Correct Marks : 5 Wrong Marks : 1

Question Key Details :

Key	Value
Comprehension	Comp1

Read the paragraph given below and answer the following questions.

Shastri was the country's Prime Minister from 1964-1966. During Shastri's brief Prime Ministership, the country faced two major challenges. While India was still recovering from the economic implications of the war with China, failed monsoons, drought and serious food crisis presented a grave challenge. The country also faced a war with Pakistan in 1965. Shastri's famous slogan 'Jai Jawan Jai Kisan', symbolised the country's resolve to face both these challenges.

Shastri's Prime Ministership came to an abrupt end on 10 January 1966, when he suddenly expired in Tashkent, then in USSR and currently the capital of Uzbekistan. He was there to discuss and sign an agreement with Muhammad Ayub Khan, the then President of Pakistan, to end the war.

Lal Bahadur Shastri was India's Prime Minister from:

1. 1965 - 1966
2. 1962 - 1966
3. 1964 - 1966
4. 1962 - 1966

Options :

- 485584135109. 1
- 485584135110. 2
- 485584135111. 3
- 485584135112. 4

Question Number : 464 Question Id : 48558433779 Question Type : MCQ Option Shuffling : No Is Question Mandatory : No Calculator : None Response Time : N.A Think Time : N.A Minimum Instruction Time : 0

Correct Marks : 5 Wrong Marks : 1

Question Key Details :

Key	Value
Comprehension	Comp1

Read the paragraph given below and answer the following questions.

Shastri was the country's Prime Minister from 1964-1966. During Shastri's brief Prime Ministership, the country faced two major challenges. While India was still recovering from the economic implications of the war with China, failed monsoons, drought and serious food crisis presented a grave challenge. The country also faced a war with Pakistan in 1965. Shastri's famous slogan 'Jai Jawan Jai Kisan', symbolised the country's resolve to face both these challenges.

Shastri's Prime Ministership came to an abrupt end on 10 January 1966, when he suddenly expired in Tashkent, then in USSR and currently the capital of Uzbekistan. He was there to discuss and sign an agreement with Muhammad Ayub Khan, the then President of Pakistan, to end the war.

Tashkent is the capital of which country now?

1. USSR
2. Uzbekistan
3. China
4. Pakistan

Options :

485584135113. 1
485584135114. 2
485584135115. 3
485584135116. 4

Question Number : 465 Question Id : 48558433780 Question Type : MCQ Option Shuffling : No Is Question Mandatory : No Calculator : None Response Time : N.A Think Time : N.A Minimum Instruction Time : 0

Correct Marks : 5 Wrong Marks : 1

Question Key Details :

Key	Value
Comprehension	Compl

Read the paragraph given below and answer the following questions.

Shastri was the country's Prime Minister from 1964-1966. During Shastri's brief Prime Ministership, the country faced two major challenges. While India was still recovering from the economic implications of the war with China, failed monsoons, drought and serious food crisis presented a grave challenge. The country also faced a war with Pakistan in 1965. Shastri's famous slogan 'Jai Jawan Jai Kisan', symbolised the country's resolve to face both these challenges.

Shastri's Prime Ministership came to an abrupt end on 10 January 1966, when he suddenly expired in Tashkent, then in USSR and currently the capital of Uzbekistan. He was there to discuss and sign an agreement with Muhammad Ayub Khan, the then President of Pakistan, to end the war.

Name the leader who had resigned from the position of Railway Minister accepting moral responsibility for a major railway accident.

1. K. Kamraj
2. Morarji Desai
3. Jawahar Lal Nehru
4. Lal Bahadur Shastri

Options :

485584135117. 1
485584135118. 2
485584135119. 3
485584135120. 4

Sub-Section Number :

3

Sub-Section Id :

4855842444

Question Shuffling Allowed :

No

Is Section Default? :

null

Question Number : 466 Question Id : 48558433781 Question Type : MCQ Option Shuffling : No Is Question Mandatory : No Calculator : None Response Time : N.A Think Time : N.A Minimum Instruction Time : 0

Correct Marks : 5 Wrong Marks : 1

Question Key Details :

Key	Value
Comprehension	Comp2

The Indian Government is already participating in global efforts through a number of programmes. For example, India's National Auto-fuel Policy mandates cleaner fuels for vehicles. The energy Conservation Act, passed in 2001, outlines initiative to improve energy efficiency. Similarly, the Electricity Act of 2003 encourages the use of renewable energy. Recent trends in importing natural gas and encouraging the adoption of clean coal technologies show that India has been making real efforts. the Government is also keen to launch a National Mission on Biodiesel, using about 11 million hectares of land to produce biodiesel by 2011-2012. India ratified the Paris Climate Agreement on 2 October 2016. And India has one of the largest renewable energy programmes in the world.

A review of the implementation of the agreements at the Earth Summit in Rio was undertaken by India in 1997.

India feels this contravenes very spirit of UNFCCC. Neither does it seem fair to impose restrictions on India when the country's rise in per capita carbon emissions by 2030 is likely to still represent less than half the world average of 3.8 tonnes in 2000. Indian emissions are predicted to rise from 0.9 tonnes per capita in 2000 to 1.6 tonnes per capita in 2030

Reservation Act was passed in

1. 2000
2. 2001
3. 2002
4. 2003

Options :

- 485584135121. 1
- 485584135122. 2
- 485584135123. 3
- 485584135124. 4

Question Number : 467 Question Id : 48558433782 Question Type : MCQ Option Shuffling : No Is Question Mandatory : No Calculator : None Response Time : N.A Think Time : N.A Minimum Instruction Time : 0

Correct Marks : 5 Wrong Marks : 1

Question Key Details :

Key	Value
Comprehension	Comp2

The Indian Government is already participating in global efforts through a number of programmes. For example, India's National Auto-fuel Policy mandates cleaner fuels for vehicles. The energy Conservation Act, passed in 2001, outlines initiative to improve energy efficiency. Similarly, the Electricity Act of 2003 encourages the use of renewable energy. Recent trends in importing natural gas and encouraging the adoption of clean coal technologies show that India has been making real efforts. the Government is also keen to launch a National Mission on Biodiesel, using about 11 million hectares of land to produce biodiesel by 2011-2012. India ratified the Paris Climate Agreement on 2 October 2016. And India has one of the largest renewable energy programmes in the world.

A review of the implementation of the agreements at the Earth Summit in Rio was undertaken by India in 1997.

India feels this contravenes very spirit of UNFCCC. Neither does it seem fair to impose restrictions on India when the country's rise in per capita carbon emissions by 2030 is likely to still represent less than half the world average of 3.8 tonnes in 2000. Indian emissions are predicted to rise from 0.9 tonnes per capita in 2000 to 1.6 tonnes per capita in 2030

Electricity Act of 2003 encourages the uses of

1. Renewable energy
2. Non renewable energy
3. No use of col technology
4. Not importing the natural gas

Options :

- 485584135125. 1
- 485584135126. 2
- 485584135127. 3
- 485584135128. 4

Question Number : 468 Question Id : 48558433783 Question Type : MCQ Option Shuffling : No Is Question Mandatory : No Calculator : None Response Time : N.A Think Time : N.A Minimum Instruction Time : 0

Correct Marks : 5 Wrong Marks : 1

Question Key Details :

Key	Value
Comprehension	Comp2

The Indian Government is already participating in global efforts through a number of programmes. For example, India's National Auto-fuel Policy mandates cleaner fuels for vehicles. The energy Conservation Act, passed in 2001, outlines initiative to improve energy efficiency. Similarly, the Electricity Act of 2003 encourages the use of renewable energy. Recent trends in importing natural gas and encouraging the adoption of clean coal technologies show that India has been making real efforts. the Government is also keen to launch a National Mission on Biodiesel, using about 11 million hectares of land to produce biodiesel by 2011-2012. India ratified the Paris Climate Agreement on 2 October 2016. And India has one of the largest renewable energy programmes in the world.

A review of the implementation of the agreements at the Earth Summit in Rio was undertaken by India in 1997.

India feels this contravenes very spirit of UNFCCC. Neither does it seem fair to impose restrictions on India when the country's rise in per capita carbon emissions by 2030 is likely to still represent less than half the world average of 3.8 tonnes in 2000. Indian emissions are predicted to rise from 0.9 tonnes per capita in 2000 to 1.6 tonnes per capita in 2030

In which year India ratified the Paris Climate Agreement?

1. 2014
2. 2015
3. 2016
4. 2017

Options :

- 485584135129. 1
- 485584135130. 2
- 485584135131. 3
- 485584135132. 4

Question Number : 469 Question Id : 48558433784 Question Type : MCQ Option Shuffling : No Is Question Mandatory : No Calculator : None Response Time : N.A Think Time : N.A Minimum Instruction Time : 0

Correct Marks : 5 Wrong Marks : 1

Question Key Details :

Key	Value
Comprehension	Comp2

The Indian Government is already participating in global efforts through a number of programmes. For example, India's National Auto-fuel Policy mandates cleaner fuels for vehicles. The energy Conservation Act, passed in 2001, outlines initiative to improve energy efficiency. Similarly, the Electricity Act of 2003 encourages the use of renewable energy. Recent trends in importing natural gas and encouraging the adoption of clean coal technologies show that India has been making real efforts. the Government is also keen to launch a National Mission on Biodiesel, using about 11 million hectares of land to produce biodiesel by 2011-2012. India ratified the Paris Climate Agreement on 2 October 2016. And India has one of the largest renewable energy programmes in the world.

A review of the implementation of the agreements at the Earth Summit in Rio was undertaken by India in 1997.

India feels this contravenes very spirit of UNFCCC. Neither does it seem fair to impose restrictions on India when the country's rise in per capita carbon emissions by 2030 is likely to still represent less than half the world average of 3.8 tonnes in 2000. Indian emissions are predicted to rise from 0.9 tonnes per capita in 2000 to 1.6 tonnes per capita in 2030

India emission are predicted to rise 1.6 tonnes per capital in _____

1. 2025
2. 2030
3. 2035
4. 2040

Options :

- 485584135133. 1
- 485584135134. 2
- 485584135135. 3
- 485584135136. 4

Question Number : 470 Question Id : 48558433785 Question Type : MCQ Option Shuffling : No Is Question Mandatory : No Calculator : None Response Time : N.A Think Time : N.A Minimum Instruction Time : 0

Correct Marks : 5 Wrong Marks : 1

Question Key Details :

Key	Value
Comprehension	Comp2

The Indian Government is already participating in global efforts through a number of programmes. For example, India's National Auto-fuel Policy mandates cleaner fuels for vehicles. The energy Conservation Act, passed in 2001, outlines initiative to improve energy efficiency. Similarly, the Electricity Act of 2003 encourages the use of renewable energy. Recent trends in importing natural gas and encouraging the adoption of clean coal technologies show that India has been making real efforts. the Government is also keen to launch a National Mission on Biodiesel, using about 11 million hectares of land to produce biodiesel by 2011-2012. India ratified the Paris Climate Agreement on 2 October 2016. And India has one of the largest renewable energy programmes in the world.

A review of the implementation of the agreements at the Earth Summit in Rio was undertaken by India in 1997.

India feels this contravenes very spirit of UNFCCC. Neither does it seem fair to impose restrictions on India when the country's rise in per capita carbon emissions by 2030 is likely to still represent less than half the world average of 3.8 tonnes in 2000. Indian emissions are predicted to rise from 0.9 tonnes per capita in 2000 to 1.6 tonnes per capita in 2030

Write the full form of UNFCCC

1. United Nations Framework Convention on Climate Change
2. Union Nations Framework Connection on Climate Change
3. United National Framework Connection on Climate Change
4. United Nations Forum Convention on Climate Change

Options :

- 485584135137. 1
- 485584135138. 2
- 485584135139. 3
- 485584135140. 4

Sociology

Group Number :	12
Group Id :	485584750
Group Maximum Duration :	45
Group Minimum Duration :	45
Show Attended Group? :	No
Edit Attended Group? :	No
Break time :	0
Group Marks :	200
Is this Group for Examiner? :	No
Examiner permission :	Cant View
Show Progress Bar? :	No

Sociology

Section Id :	485584868
Section Number :	1
Section type :	Online

Mandatory or Optional :	Mandatory
Number of Questions :	50
Number of Questions to be attempted :	40
Section Marks :	200
Enable Mark as Answered Mark for Review and Clear Response :	Yes
Maximum Instruction Time :	0
Sub-Section Number :	1
Sub-Section Id :	4855842445
Question Shuffling Allowed :	Yes
Is Section Default? :	null

Question Number : 471 Question Id : 48558433786 Question Type : MCQ Option Shuffling : No Is Question Mandatory : No Calculator : None Response Time : N.A Think Time : N.A Minimum Instruction Time : 0

Correct Marks : 5 Wrong Marks : 1

Question Key Details :

Key	Value
Comprehension	MCQ

What is the basis of creation of the new states of Chattisgarh, Uttarakhand and Jharkhand?

1. Ethnicity
2. Administrative
3. Linguistic
4. Special Status

Options :

485584135141. 1
 485584135142. 2
 485584135143. 3
 485584135144. 4

Question Number : 472 Question Id : 48558433787 Question Type : MCQ Option Shuffling : No Is Question Mandatory : No Calculator : None Response Time : N.A Think Time : N.A Minimum Instruction Time : 0

Correct Marks : 5 Wrong Marks : 1

Question Key Details :

Key	Value
Comprehension	MCQ

Policies which are aimed at persuading, encouraging or forcing all citizens to adopt a uniform set of cultural values and norms is called

1. Pluralist
2. Nationalist
3. Assimilationist
4. Multiculturalist

Options :

485584135145. 1
 485584135146. 2

485584135147. 3

485584135148. 4

Question Number : 473 Question Id : 48558433788 Question Type : MCQ Option Shuffling : No Is Question Mandatory : No Calculator : None Response Time : N.A Think Time : N.A Minimum Instruction Time : 0

Correct Marks : 5 Wrong Marks : 1

Question Key Details :

Key	Value
Comprehension	MCQ

According to western context, what does secularism actually denote?

1. Religious Chauvinism
2. Separation of religious and political authority
3. All religions are same and must
4. Keeping away the hostility between religions

Options :

485584135149. 1

485584135150. 2

485584135151. 3

485584135152. 4

Question Number : 474 Question Id : 48558433789 Question Type : MCQ Option Shuffling : No Is Question Mandatory : No Calculator : None Response Time : N.A Think Time : N.A Minimum Instruction Time : 0

Correct Marks : 5 Wrong Marks : 1

Question Key Details :

Key	Value
Comprehension	MCQ

Who argued that the nature of urban impact varies according to the kind relation a village has with a city or town?

1. M.S.A. Rao
2. Emile Durkheim
3. M.N. Srinivas
4. Louis Wirth

Options :

485584135153. 1

485584135154. 2

485584135155. 3

485584135156. 4

Question Number : 475 Question Id : 48558433790 Question Type : MCQ Option Shuffling : No Is Question Mandatory : No Calculator : None Response Time : N.A Think Time : N.A Minimum Instruction Time : 0

Correct Marks : 5 Wrong Marks : 1

Question Key Details :

Key	Value
-----	-------

The different ways in which British colonialism lives on in contemporary India:

- A. Learning Indian classical music and dance
- B. Eating using fork and spoon
- C. Wearing skirts and trousers
- D. Online education
- E. Driving on the left side of the road

Choose the correct answer from the options given below:

- 1. B, D, E only
- 2. B, C, E only
- 3. A, B, D only
- 4. A, C, D only

Options :

- 485584135157. 1
- 485584135158. 2
- 485584135159. 3
- 485584135160. 4

Question Number : 476 Question Id : 48558433791 Question Type : MCQ Option Shuffling : No Is Question Mandatory : No Calculator : None Response Time : N.A Think Time : N.A Minimum Instruction Time : 0

Correct Marks : 5 Wrong Marks : 1

Question Key Details :

Key	Value
Comprehension	MCQ

High rates of infant mortality and maternal mortality are the result of which factors?

- 1. Poverty and development
- 2. Poverty and illiteracy
- 3. Life expectancy and poverty
- 4. Literacy and development

Options :

- 485584135161. 1
- 485584135162. 2
- 485584135163. 3
- 485584135164. 4

Question Number : 477 Question Id : 48558433792 Question Type : MCQ Option Shuffling : No Is Question Mandatory : No Calculator : None Response Time : N.A Think Time : N.A Minimum Instruction Time : 0

Correct Marks : 5 Wrong Marks : 1

Question Key Details :

Key	Value
Comprehension	MCQ

The NGO, Mahila Samakhya, adopted an innovative method to communicate about the Panchayat Raj system to the women in villages.

1. Documentary
2. Speech
3. Phad
4. Focus group discussion

Options :

- 485584135165. 1
- 485584135166. 2
- 485584135167. 3
- 485584135168. 4

Question Number : 478 Question Id : 48558433793 Question Type : MCQ Option Shuffling : No Is Question Mandatory : No Calculator : None Response Time : N.A Think Time : N.A Minimum Instruction Time : 0

Correct Marks : 5 Wrong Marks : 1

Question Key Details :

Key	Value
Comprehension	MCQ

India has which kind of democracy?

1. Direct democracy
2. Representative democracy
3. Indirect democracy
4. Non-representative democracy

Options :

- 485584135169. 1
- 485584135170. 2
- 485584135171. 3
- 485584135172. 4

Question Number : 479 Question Id : 48558433794 Question Type : MCQ Option Shuffling : No Is Question Mandatory : No Calculator : None Response Time : N.A Think Time : N.A Minimum Instruction Time : 0

Correct Marks : 5 Wrong Marks : 1

Question Key Details :

Key	Value
Comprehension	MCQ

Opinions that are not fact based can be understood as

1. Prejudice
2. Untouchability
3. Inclusion
4. Exclusion

Options :

485584135173. 1
485584135174. 2
485584135175. 3
485584135176. 4

Question Number : 480 Question Id : 48558433795 Question Type : MCQ Option Shuffling : No Is Question Mandatory : No Calculator : None Response Time : N.A Think Time : N.A Minimum Instruction Time : 0

Correct Marks : 5 Wrong Marks : 1

Question Key Details :

Key	Value
Comprehension	MCQ

Match the newspapers in List I with the language in List II

LIST I		LIST II	
A.	Kesari	I.	Malayali
B.	Mathrubhumi	II.	Hindi
C.	Sambad-Kaumudi	III.	Bengali
D.	Amar Ujala	IV.	Marathi

Choose the correct answer from the options given below:

1. A-I, B-II, C-III, D-IV
2. A-IV, B-I, C-III, D-II
3. A-IV, B-II, C-I, D-III
4. A-IV, B-II, C-III, D-I

Options :

485584135177. 1
485584135178. 2
485584135179. 3
485584135180. 4

Question Number : 481 Question Id : 48558433796 Question Type : MCQ Option Shuffling : No Is Question Mandatory : No Calculator : None Response Time : N.A Think Time : N.A Minimum Instruction Time : 0

Correct Marks : 5 Wrong Marks : 1

Question Key Details :

Key	Value
Comprehension	MCQ

Why is Demographic Dividend considered temporary?

1. Larger pool of working age people will gradually turn into non-working old age group
2. Larger pool of non-working people will eventually turn into working people
3. Eventually the number of non-working people will be equal to that of working people
4. Larger pool of non-working people will be employed due to Government policies

Options :

485584135181. 1
485584135182. 2
485584135183. 3
485584135184. 4

Question Number : 482 Question Id : 48558433797 Question Type : MCQ Option Shuffling : No Is Question Mandatory : No Calculator : None Response Time : N.A Think Time : N.A Minimum Instruction Time : 0

Correct Marks : 5 Wrong Marks : 1

Question Key Details :

Key	Value
Comprehension	MCQ

Identify the three villages that were initially brought together to establish the trading post on river Hooghly by the English in 17th century.

1. Kolikata, Maidan, Fort William
2. Sutanuti, Gobindapur, Fort William
3. Sutanuti, Kolikata, Fort William
4. Kolikata, Sutanuti, Gobindapur

Options :

485584135185. 1
485584135186. 2
485584135187. 3
485584135188. 4

Question Number : 483 Question Id : 48558433798 Question Type : MCQ Option Shuffling : No Is Question Mandatory : No Calculator : None Response Time : N.A Think Time : N.A Minimum Instruction Time : 0

Correct Marks : 5 Wrong Marks : 1

Question Key Details :

Key	Value
Comprehension	MCQ

Who believed that famines are the result of "failure of entitlements"?

1. Karl Marx
2. Amartya Sen
3. Malthus
4. Emile Durkheim

Options :

- 485584135189. 1
- 485584135190. 2
- 485584135191. 3
- 485584135192. 4

Question Number : 484 Question Id : 48558433799 Question Type : MCQ Option Shuffling : No Is Question Mandatory : No Calculator : None Response Time : N.A Think Time : N.A Minimum Instruction Time : 0

Correct Marks : 5 Wrong Marks : 1

Question Key Details :

Key	Value
Comprehension	MCQ

When did Right to Information Act came into force?

1. October 13, 2005
2. October 13, 2006
3. June 15, 2005
4. June 15, 2006

Options :

- 485584135193. 1
- 485584135194. 2
- 485584135195. 3
- 485584135196. 4

Question Number : 485 Question Id : 48558433800 Question Type : MCQ Option Shuffling : No Is Question Mandatory : No Calculator : None Response Time : N.A Think Time : N.A Minimum Instruction Time : 0

Correct Marks : 5 Wrong Marks : 1

Question Key Details :

Key	Value
Comprehension	MCQ

Identify the key characteristic of social stratification from the list given below:

- A. It is social and not individual in character
- B. Social stratification persists through ideologies and practices
- C. It persists over generations
- D. It is natural
- E. It is not natural

Choose the correct answer from the options given below:

- 1. A, B, C only
- 2. B, C, E only
- 3. D, C, E only
- 4. A, D, E only

Options :

- 485584135197. 1
- 485584135198. 2
- 485584135199. 3
- 485584135200. 4

Question Number : 486 Question Id : 48558433801 Question Type : MCQ Option Shuffling : No Is Question Mandatory : No Calculator : None Response Time : N.A Think Time : N.A Minimum Instruction Time : 0

Correct Marks : 5 Wrong Marks : 1

Question Key Details :

Key	Value
Comprehension	MCQ

What does population pyramid show?

- 1. Age, Birth rate, Growth
- 2. Age, Gender, Growth
- 3. Age, Birth rate, Life expectancy
- 4. Birth rate, Gender, Life expectancy

Options :

- 485584135201. 1
- 485584135202. 2
- 485584135203. 3
- 485584135204. 4

Question Number : 487 Question Id : 48558433802 Question Type : MCQ Option Shuffling : No Is Question Mandatory : No Calculator : None Response Time : N.A Think Time : N.A Minimum Instruction Time : 0

Correct Marks : 5 Wrong Marks : 1

Question Key Details :

Key	Value
Comprehension	MCQ

Match the books in List I with the authors in List II

LIST I		LIST II	
A.	Stree Purush Tulana	I.	Daya Pawar
B.	The city	II.	Begum Rokeya
C.	Analogy of Religion	III.	Tarabai Shinde
D.	Sultana's Dream	IV.	Bishop Joseph Butler

Choose the correct answer from the options given below:

1. A-I, B-II, C-III, D-IV
2. A-IV, B-I, C-III, D-II
3. A-III, B-I, C-IV, D-II
4. A-IV, B-II, C-III, D-I

Options :

485584135205. 1
485584135206. 2
485584135207. 3
485584135208. 4

Question Number : 488 Question Id : 48558433803 Question Type : MCQ Option Shuffling : No Is Question Mandatory : No Calculator : None Response Time : N.A Think Time : N.A Minimum Instruction Time : 0

Correct Marks : 5 Wrong Marks : 1

Question Key Details :

Key	Value
Comprehension	MCQ

The working age group considered for measuring dependency ratio is:

1. 15-64 years
2. 16-64 years
3. 18-70 years
4. 20-50 years

Options :

485584135209. 1
485584135210. 2
485584135211. 3
485584135212. 4

Question Number : 489 Question Id : 48558433804 Question Type : MCQ Option Shuffling : No Is Question Mandatory : No Calculator : None Response Time : N.A Think Time : N.A Minimum Instruction Time : 0

Correct Marks : 5 Wrong Marks : 1

Question Key Details :

Key	Value
Comprehension	MCQ

In Madhopur village, 77 out of 298 households work and live in the cities of Bombay and Calcutta. What does the example reflect?

1. Industrialisation
2. Urbanisation
3. Migration
4. Ghettoization

Options :

- 485584135213. 1
- 485584135214. 2
- 485584135215. 3
- 485584135216. 4

Question Number : 490 Question Id : 48558433805 Question Type : MCQ Option Shuffling : No Is Question Mandatory : No Calculator : None Response Time : N.A Think Time : N.A Minimum Instruction Time : 0

Correct Marks : 5 Wrong Marks : 1

Question Key Details :

Key	Value
Comprehension	MCQ

Common features of caste system include

- A. equalities within the same caste members
- B. social mobility
- C. occupational link
- D. subdivisions
- E. hierarchical arrangements

Choose the correct answer from the options given below:

1. A, B, C, D only
2. A, B, D, E only
3. B, C, D, E only
4. A, C, D, E only

Options :

- 485584135217. 1
- 485584135218. 2
- 485584135219. 3
- 485584135220. 4

Question Number : 491 Question Id : 48558433806 Question Type : MCQ Option Shuffling : No Is Question Mandatory : No Calculator : None Response Time : N.A Think Time : N.A Minimum Instruction Time : 0

Correct Marks : 5 Wrong Marks : 1

Question Key Details :

Key	Value
Comprehension	MCQ

Match the concept in List I with the example in List II

LIST I Concept		LIST II Example	
A.	Weekly market	I.	Use of branded cars
B.	Status symbol	II.	BPO
C.	Commodification	III.	Dhorai
D.	Globalisation	IV.	Sale of kidney to rich patients

Choose the correct answer from the options given below:

1. A-III, B-II, C-I, D-IV
2. A-III, B-IV, C-II, D-I
3. A-III, B-I, C-IV, D-II
4. A-II, B-I, C-III, D-IV

Options :

485584135221. 1
485584135222. 2
485584135223. 3
485584135224. 4

Question Number : 492 Question Id : 48558433807 Question Type : MCQ Option Shuffling : No Is Question Mandatory : No Calculator : None Response Time : N.A Think Time : N.A Minimum Instruction Time : 0

Correct Marks : 5 Wrong Marks : 1

Question Key Details :

Key	Value
Comprehension	MCQ

Arrange the states having lowest to highest child sex-ratio as per 2011 Census:

- A. Himachal Pradesh
- B. Kerala
- C. Bihar
- D. Haryana
- E. Rajasthan

Choose the correct answer from the options given below:

1. D, E, A, C, B
2. C, D, A, B, E
3. B, A, D, E, C
4. C, A, D, E, B

Options :

485584135225. 1
485584135226. 2
485584135227. 3

Question Number : 493 Question Id : 48558433808 Question Type : MCQ Option Shuffling : No Is Question Mandatory : No Calculator : None Response Time : N.A Think Time : N.A Minimum Instruction Time : 0

Correct Marks : 5 Wrong Marks : 1

Question Key Details :

Key	Value
Comprehension	MCQ

Arrange the following groups in an ascending order in terms of their percentage share in the Bidi industry:

- A. Manufacturer
- B. Worker
- C. Contractor
- D. Distributor

Choose the correct answer from the options given below:

- 1. A, C, B, D
- 2. B, C, D, A
- 3. A, B, C, D
- 4. B, D, C, A

Options :

- 485584135229. 1
- 485584135230. 2
- 485584135231. 3
- 485584135232. 4

Question Number : 494 Question Id : 48558433809 Question Type : MCQ Option Shuffling : No Is Question Mandatory : No Calculator : None Response Time : N.A Think Time : N.A Minimum Instruction Time : 0

Correct Marks : 5 Wrong Marks : 1

Question Key Details :

Key	Value
Comprehension	MCQ

For migrant workers Jan Breman has used the term:

- 1. Footloose labour
- 2. Loose labour
- 3. Mobile labour
- 4. Migratory labour

Options :

- 485584135233. 1
- 485584135234. 2
- 485584135235. 3
- 485584135236. 4

Question Number : 495 Question Id : 48558433810 Question Type : MCQ Option Shuffling : No Is Question Mandatory : No Calculator : None Response Time : N.A Think Time : N.A Minimum Instruction Time : 0

Correct Marks : 5 Wrong Marks : 1

Question Key Details :

Key	Value
Comprehension	MCQ

Identify the permanent traits of tribes from the list provided below:

- A. Language
- B. Mode of livelihood
- C. Region
- D. Extent of incorporation into Hindu society
- E. Physical characteristics

Choose the correct answer from the options given below:

- 1. A, C, E, only
- 2. B, D, E, only
- 3. A, B, C, only
- 4. B, C, E, only

Options :

- 485584135237. 1
- 485584135238. 2
- 485584135239. 3
- 485584135240. 4

Question Number : 496 Question Id : 48558433811 Question Type : MCQ Option Shuffling : No Is Question Mandatory : No Calculator : None Response Time : N.A Think Time : N.A Minimum Instruction Time : 0

Correct Marks : 5 Wrong Marks : 1

Question Key Details :

Key	Value
Comprehension	MCQ

Arrange the four-fold division of society into the varna system:

- A. Vaisya
- B. Brahmin
- C. Sudra
- D. Kshatriya

Choose the correct answer from the options given below:

- 1. B, D, A, C
- 2. B, A, C, D
- 3. A, B, C, D
- 4. C, B, D, A

Options :

- 485584135241. 1
- 485584135242. 2
- 485584135243. 3
- 485584135244. 4

Question Number : 497 Question Id : 48558433812 Question Type : MCQ Option Shuffling : No Is Question Mandatory : No Calculator : None Response Time : N.A Think Time : N.A Minimum Instruction Time : 0

Correct Marks : 5 Wrong Marks : 1

Question Key Details :

Key	Value
Comprehension	MCQ

Impact of urbanization on peripheral villages:

- A. People build fashionable houses
- B. Pressure on resources
- C. Conflicts between migrants and villagers
- D. Out migration
- E. Uprooting villagers from their land

Choose the correct answer from the options given below:

- 1. A, C, D, E, only
- 2. A, B, C, D only
- 3. A, B, C, E only
- 4. B, C, D, E only

Options :

- 485584135245. 1
- 485584135246. 2
- 485584135247. 3
- 485584135248. 4

Question Number : 498 Question Id : 48558433813 Question Type : MCQ Option Shuffling : No Is Question Mandatory : No Calculator : None Response Time : N.A Think Time : N.A Minimum Instruction Time : 0

Correct Marks : 5 Wrong Marks : 1

Question Key Details :

Key	Value
Comprehension	MCQ

The situation where people do not enjoy work and see it as something they have to do only for livelihood is described as:

- 1. Exploitation
- 2. Alienation
- 3. Marginalization
- 4. Discrimination

Options :

485584135249. 1
485584135250. 2
485584135251. 3
485584135252. 4

Question Number : 499 Question Id : 48558433814 Question Type : MCQ Option Shuffling : No Is Question Mandatory : No Calculator : None Response Time : N.A Think Time : N.A Minimum Instruction Time : 0

Correct Marks : 5 Wrong Marks : 1

Question Key Details :

Key	Value
Comprehension	MCQ

From the choices given below choose the scheme associated with providing help to the farmers.

1. Beti bachao, Beti padhao
2. Green revolution
3. Pradhan Mantri Fasal Bima Yojana
4. Land Ceiling Act

Options :

485584135253. 1
485584135254. 2
485584135255. 3
485584135256. 4

Question Number : 500 Question Id : 48558433815 Question Type : MCQ Option Shuffling : No Is Question Mandatory : No Calculator : None Response Time : N.A Think Time : N.A Minimum Instruction Time : 0

Correct Marks : 5 Wrong Marks : 1

Question Key Details :

Key	Value
Comprehension	MCQ

Match the concept in List I with the explanation in List II

LIST I Concept		LIST II Explanation	
A.	Preventive checks	I.	Number of females per 1000 males in a given area at a specified time period
B.	Positive checks	II.	Estimated number of years that an average person is expected to survive
C.	Life expectancy	III.	Voluntary action to reduce population (like postponing marriage)
D.	Sex-ratio	IV.	Involuntary events to reduce population (like famine)

Choose the correct answer from the options given below:

1. A-IV, B-III, C-II, D-I
2. A-III, B-IV, C-II, D-I
3. A-IV, B-II, C-III, D-I
4. A-I, B-II, C-III, D-IV

Options :

- 485584135257. 1
- 485584135258. 2
- 485584135259. 3
- 485584135260. 4

Question Number : 501 Question Id : 48558433816 Question Type : MCQ Option Shuffling : No Is Question Mandatory : No Calculator : None Response Time : N.A Think Time : N.A Minimum Instruction Time : 0

Correct Marks : 5 Wrong Marks : 1

Question Key Details :

Key	Value
Comprehension	MCQ

The work culture where workers work for extended hours beyond the regular time either to complete the project or please the boss is called:

1. Flexi-time
2. Night out
3. Time slavery
4. Work pressure

Options :

- 485584135261. 1
- 485584135262. 2
- 485584135263. 3
- 485584135264. 4

Question Number : 502 Question Id : 48558433817 Question Type : MCQ Option Shuffling : No Is Question Mandatory : No Calculator : None Response Time : N.A Think Time : N.A Minimum Instruction Time : 0

Correct Marks : 5 Wrong Marks : 1

Question Key Details :

Key	Value
Comprehension	MCQ

Recent developments in Varanasi and its promotion in media made the city an attractive tourist spot. With which theory can this example be associated with?

1. Corporate culture
2. Culture of consumption
3. Globalization of culture
4. Conscious consumption

Options :

- 485584135265. 1
- 485584135266. 2
- 485584135267. 3
- 485584135268. 4

Question Number : 503 Question Id : 48558433818 Question Type : MCQ Option Shuffling : No Is Question Mandatory : No Calculator : None Response Time : N.A Think Time : N.A Minimum Instruction Time : 0

Correct Marks : 5 Wrong Marks : 1

Question Key Details :

Key	Value
Comprehension	MCQ

Arrange in a chronological manner from earliest to latest developments:

- A. SRC mandated redrawing of the map of India on linguistic lines
- B. Many feared that states based on language will hasten further division of India
- C. Indian National Congress was constituted on linguistic lines
- D. India became independent but was partitioned along religious lines
- E. Creation of Andhra Pradesh after the death of Potti Sriramulu

Choose the correct answer from the options given below:

1. C, D, B, E, A
2. A, B, D, C, B
3. A, B, D, C, E
4. D, C, B, A, E

Options :

- 485584135269. 1
- 485584135270. 2
- 485584135271. 3
- 485584135272. 4

Question Number : 504 Question Id : 48558433819 Question Type : MCQ Option Shuffling : No Is Question Mandatory : No Calculator : None Response Time : N.A Think Time : N.A Minimum Instruction Time : 0

Correct Marks : 5 Wrong Marks : 1

Question Key Details :

Key	Value
Comprehension	MCQ

A movement that is aimed in bringing change in the personal consciousness and actions of individual members is called:

1. Reformist social movement
2. Revolutionary social movement
3. Historical social movement
4. Redemptive social movement

Options :

- 485584135273. 1
- 485584135274. 2
- 485584135275. 3
- 485584135276. 4

Question Number : 505 Question Id : 48558433820 Question Type : MCQ Option Shuffling : No Is Question Mandatory : No Calculator : None Response Time : N.A Think Time : N.A Minimum Instruction Time : 0

Correct Marks : 5 Wrong Marks : 1

Question Key Details :

Key	Value
Comprehension	MCQ

Match the laws in List I with the year adopted in List II

LIST I Laws/Acts		LIST II Year of Adoption/Passing	
A.	Caste Disabilities Removal Act	I.	1989
B.	Constitution Amendment (93rd) Act	II.	1950
C.	(Article 17) Abolishing of Untouchability	III.	1850
D.	Prevention of Atrocities Act	IV.	2006

Choose the correct answer from the options given below:

1. A-I, B-II, C-III, D-IV
2. A-IV, B-III, C-II, D-I
3. A-III, B-IV, C-II, D-I
4. A-IV, B-II, C-I, D-III

Options :

- 485584135277. 1

485584135278. 2
485584135279. 3
485584135280. 4

Question Number : 506 Question Id : 48558433821 Question Type : MCQ Option Shuffling : No Is Question Mandatory : No Calculator : None Response Time : N.A Think Time : N.A Minimum Instruction Time : 0

Correct Marks : 5 Wrong Marks : 1

Question Key Details :

Key	Value
Comprehension	MCQ

The floods caused by the unusually heavy monsoon in the Alaknanda valley marked a turning point in the ecological history of the region. What is being referred to here?

1. Budhan movement
2. Chipko movement
3. Swacch Bharat Mission
4. Namami Gange Project

Options :

485584135281. 1
485584135282. 2
485584135283. 3
485584135284. 4

Question Number : 507 Question Id : 48558433822 Question Type : MCQ Option Shuffling : No Is Question Mandatory : No Calculator : None Response Time : N.A Think Time : N.A Minimum Instruction Time : 0

Correct Marks : 5 Wrong Marks : 1

Question Key Details :

Key	Value
Comprehension	MCQ

Who is associated with the anti-caste movement in 19th century?

1. Mahatma Gandhi
2. Jyotiba Phule
3. Raja Rammohan Roy
4. Birsa Munda

Options :

485584135285. 1
485584135286. 2
485584135287. 3
485584135288. 4

Question Number : 508 Question Id : 48558433823 Question Type : MCQ Option Shuffling : No Is Question Mandatory : No Calculator : None Response Time : N.A Think Time : N.A Minimum Instruction Time : 0

Correct Marks : 5 Wrong Marks : 1

Question Key Details :

Key	Value
Comprehension	MCQ

Arrange the following newspapers in order of their year of publication from the earliest to the latest.

- A. The Madras Mail
- B. The Statesman
- C. The Times of India
- D. The Pioneer
- E. The Civil and Military Gazettee

Choose the correct answer from the options given below:

1. C, D, A, B, E
2. B, D, C, A, E
3. A, B, E, D, C
4. A, C, B, E, D

Options :

485584135289. 1
485584135290. 2
485584135291. 3
485584135292. 4

Question Number : 509 Question Id : 48558433824 Question Type : MCQ Option Shuffling : No Is Question Mandatory : No Calculator : None Response Time : N.A Think Time : N.A Minimum Instruction Time : 0

Correct Marks : 5 Wrong Marks : 1

Question Key Details :

Key	Value
Comprehension	MCQ

One of the key issues that bind the tribal movement across India.

1. Over exploitation
2. Language
3. Alienation from forest lands
4. Ethnicity

Options :

485584135293. 1
485584135294. 2
485584135295. 3
485584135296. 4

Question Number : 510 Question Id : 48558433825 Question Type : MCQ Option Shuffling : No Is Question Mandatory : No Calculator : None Response Time : N.A Think Time : N.A Minimum Instruction Time : 0

Correct Marks : 5 Wrong Marks : 1

Question Key Details :

Key	Value
-----	-------

Comprehension	MCQ
---------------	-----

What was the common demand among the jute workers of Kolkata, cotton mill workers of Buckingham and Ahmedabad?

1. Better working conditions
2. 25% increase of wages
3. 50% increase of wages
4. Less working hours

Options :

485584135297. 1
 485584135298. 2
 485584135299. 3
 485584135300. 4

Sub-Section Number : 2
Sub-Section Id : 4855842446
Question Shuffling Allowed : No
Is Section Default? : null

Question Number : 511 Question Id : 48558433826 Question Type : MCQ Option Shuffling : No Is Question Mandatory : No Calculator : None Response Time : N.A Think Time : N.A Minimum Instruction Time : 0

Correct Marks : 5 Wrong Marks : 1

Question Key Details :

Key	Value
Comprehension	Comp1

Read the passage and answer the questions:

Regionalism in India is rooted in India's diversity of languages, cultures, tribes and religions. It is also encouraged by the geographical concentration of these identity workers in particular regions and fuelled by a sense of regional deprivation. Indian federalism has been a means of accommodating these regional sentiments.

After independence, initially the Indian state continued with the British-Indian arrangement, dividing India into large provinces, also called 'Presidencies'. These were large multi-ethnic and multilingual provincial states constituting the major political-administrative units of a semi-federal state called the Union of India. Languages coupled with regional and tribal identity and not religion has therefore provided the most powerful instrument for the formation of ethno-rational identity in India.

The three major factors for the formation of ethno-rational identity in India are:

1. Linguistic, tribal and religious identity
2. Linguistic, caste and tribal identity
3. Regional, linguistic and tribal identity
4. Religious, linguistic and caste identity

Options :

- 485584135301. 1
- 485584135302. 2
- 485584135303. 3
- 485584135304. 4

Question Number : 512 Question Id : 48558433827 Question Type : MCQ Option Shuffling : No Is Question Mandatory : No Calculator : None Response Time : N.A Think Time : N.A Minimum Instruction Time : 0

Correct Marks : 5 Wrong Marks : 1

Question Key Details :

Key	Value
Comprehension	Comp1

Read the passage and answer the questions:

Regionalism in India is rooted in India's diversity of languages, cultures, tribes and religions. It is also encouraged by the geographical concentration of these identity workers in particular regions and fuelled by a sense of regional deprivation. Indian federalism has been a means of accommodating these regional sentiments.

After independence, initially the Indian state continued with the British-Indian arrangement, dividing India into large provinces, also called 'Presidencies'. These were large multi-ethnic and multilingual provincial states constituting the major political-administrative units of a semi-federal state called the Union of India. Languages coupled with regional and tribal identity and not religion has therefore provided the most powerful instrument for the formation of ethno-rational identity in India.

Which of the following cultural markers is not responsible for regionalism in India?

1. Tribe
2. Caste
3. Religion
4. Language

Options :

- 485584135305. 1
- 485584135306. 2
- 485584135307. 3
- 485584135308. 4

Question Number : 513 Question Id : 48558433828 Question Type : MCQ Option Shuffling : No Is Question Mandatory : No Calculator : None Response Time : N.A Think Time : N.A Minimum Instruction Time : 0

Correct Marks : 5 Wrong Marks : 1

Question Key Details :

Key	Value
Comprehension	Comp1

Read the passage and answer the questions:

Regionalism in India is rooted in India's diversity of languages, cultures, tribes and religions. It is also encouraged by the geographical concentration of these identity workers in particular regions and fuelled by a sense of regional deprivation. Indian federalism has been a means of accommodating these regional sentiments.

After independence, initially the Indian state continued with the British-Indian arrangement, dividing India into large provinces, also called 'Presidencies'. These were large multi-ethnic and multilingual provincial states constituting the major political-administrative units of a semi-federal state called the Union of India. Languages coupled with regional and tribal identity and not religion has therefore provided the most powerful instrument for the formation of ethno-rational identity in India.

During British period, India was divided into large provinces called

1. Principalities
2. State
3. Princely states
4. Presidencies

Options :

- 485584135309. 1
- 485584135310. 2
- 485584135311. 3
- 485584135312. 4

Question Number : 514 Question Id : 48558433829 Question Type : MCQ Option Shuffling : No Is Question Mandatory : No Calculator : None Response Time : N.A Think Time : N.A Minimum Instruction Time : 0

Correct Marks : 5 Wrong Marks : 1

Question Key Details :

Key	Value
Comprehension	Compl

Read the passage and answer the questions:

Regionalism in India is rooted in India's diversity of languages, cultures, tribes and religions. It is also encouraged by the geographical concentration of these identity workers in particular regions and fuelled by a sense of regional deprivation. Indian federalism has been a means of accommodating these regional sentiments.

After independence, initially the Indian state continued with the British-Indian arrangement, dividing India into large provinces, also called 'Presidencies'. These were large multi-ethnic and multilingual provincial states constituting the major political-administrative units of a semi-federal state called the Union of India. Languages coupled with regional and tribal identity and not religion has therefore provided the most powerful instrument for the formation of ethno-rational identity in India.

The term used for addressing the existence of diversity of languages is

1. Multi-lingual
2. Multicultural
3. Multi-ethnic
4. Mono-lingual

Options :

485584135313. 1
485584135314. 2
485584135315. 3
485584135316. 4

Question Number : 515 Question Id : 48558433830 Question Type : MCQ Option Shuffling : No Is Question Mandatory : No Calculator : None Response Time : N.A Think Time : N.A Minimum Instruction Time : 0

Correct Marks : 5 Wrong Marks : 1

Question Key Details :

Key	Value
Comprehension	Comp1

Read the passage and answer the questions:

Regionalism in India is rooted in India's diversity of languages, cultures, tribes and religions. It is also encouraged by the geographical concentration of these identity workers in particular regions and fuelled by a sense of regional deprivation. Indian federalism has been a means of accommodating these regional sentiments.

After independence, initially the Indian state continued with the British-Indian arrangement, dividing India into large provinces, also called 'Presidencies'. These were large multi-ethnic and multilingual provincial states constituting the major political-administrative units of a semi-federal state called the Union of India. Languages coupled with regional and tribal identity and not religion has therefore provided the most powerful instrument for the formation of ethno-rational identity in India.

For the growth of regionalism, the prerequisite is

1. Sense of being dominant
2. Sense of deprivation
3. Sense of empowerment
4. Sense of advancement

Options :

485584135317. 1
485584135318. 2
485584135319. 3
485584135320. 4

Sub-Section Number :

3

Sub-Section Id :

4855842447

Question Shuffling Allowed :

No

Is Section Default? :

null

Question Number : 516 Question Id : 48558433831 Question Type : MCQ Option Shuffling : No Is Question Mandatory : No Calculator : None Response Time : N.A Think Time : N.A Minimum Instruction Time : 0

Correct Marks : 5 Wrong Marks : 1

Question Key Details :

Key	Value
Comprehension	Comp2

Read the passage and answer the following questions:

These are indicators of the process of globalisation of agriculture, or the incorporation of agriculture into the larger global market - a process that has had direct effects on farmers and rural society. For instance, in some regions such as Punjab and Karnataka, farmers enter into contracts with multinational companies (such as PepsiCo) to grow certain crops (such as tomatoes and potatoes), which the companies then buy from them for processing or export. In such 'contract farming' systems, the company identifies the crops to be grown, provides the seeds and other inputs, as well as the knowhow and often also the working capital. In return, the farmer is assured of a market because the company guarantees that it will purchase the produce at a predetermined fixed price. Contract farming is very common now in the production of specialised items such as cut flowers, fruits such as grapes, figs and pomegranates, cotton and oil seeds. While contract farming appears to provide financial security to farmers, it can also lead to greater insecurity as farmers become dependent on these companies for their livelihoods. Contract farming of export-oriented products such as flowers and gherkins also means that agricultural land is diverted from food grain production. Contract farming has sociological significance in that it disengages many people from the production process and makes their own indigenous knowledge of agriculture irrelevant. In addition, contract farming caters primarily to the production of elite items, and because it usually requires high doses of fertilisers and pesticides, it is often not ecologically sustainable.

Contract farming happens for:

1. Cash crops only
2. Food crops only
3. Oil seeds and cotton
4. Food processing industry

Options :

485584135321. 1

485584135322. 2

485584135323. 3

485584135324. 4

Question Number : 517 Question Id : 48558433832 Question Type : MCQ Option Shuffling : No Is Question Mandatory : No Calculator : None Response Time : N.A Think Time : N.A Minimum Instruction Time : 0

Correct Marks : 5 Wrong Marks : 1

Question Key Details :

Key	Value
Comprehension	Comp2

Read the passage and answer the following questions:

These are indicators of the process of globalisation of agriculture, or the incorporation of agriculture into the larger global market - a process that has had direct effects on farmers and rural society. For instance, in some regions such as Punjab and Karnataka, farmers enter into contracts with multinational companies (such as PepsiCo) to grow certain crops (such as tomatoes and potatoes), which the companies then buy from them for processing or export. In such 'contract farming' systems, the company identifies the crops to be grown, provides the seeds and other inputs, as well as the knowhow and often also the working capital. In return, the farmer is assured of a market because the company guarantees that it will purchase the produce at a predetermined fixed price. Contract farming is very common now in the production of specialised items such as cut flowers, fruits such as grapes, figs and pomegranates, cotton and oil seeds. While contract farming appears to provide financial security to farmers, it can also lead to greater insecurity as farmers become dependent on these companies for their livelihoods. Contract farming of export-oriented products such as flowers and gherkins also means that agricultural land is diverted from food grain production. Contract farming has sociological significance in that it disengages many people from the production process and makes their own indigenous knowledge of agriculture irrelevant. In addition, contract farming caters primarily to the production of elite items, and because it usually requires high doses of fertilisers and pesticides, it is often not ecologically sustainable.

The change in the nature of relationship between landlords and agricultural workers has been described by the sociologist Jan Brewman as:

1. shift from patronage to exploitation
2. shift from ownership to tenancy
3. withdrawal from subsistence farming
4. withdrawal from agriculture

Options :

- 485584135325. 1
- 485584135326. 2
- 485584135327. 3
- 485584135328. 4

Question Number : 518 Question Id : 48558433833 Question Type : MCQ Option Shuffling : No Is Question Mandatory : No Calculator : None Response Time : N.A Think Time : N.A Minimum Instruction Time : 0

Correct Marks : 5 Wrong Marks : 1

Question Key Details :

Key	Value
Comprehension	Comp2

Read the passage and answer the following questions:

These are indicators of the process of globalisation of agriculture, or the incorporation of agriculture into the larger global market - a process that has had direct effects on farmers and rural society. For instance, in some regions such as Punjab and Karnataka, farmers enter into contracts with multinational companies (such as PepsiCo) to grow certain crops (such as tomatoes and potatoes), which the companies then buy from them for processing or export. In such 'contract farming' systems, the company identifies the crops to be grown, provides the seeds and other inputs, as well as the knowhow and often also the working capital. In return, the farmer is assured of a market because the company guarantees that it will purchase the produce at a predetermined fixed price. Contract farming is very common now in the production of specialised items such as cut flowers, fruits such as grapes, figs and pomegranates, cotton and oil seeds. While contract farming appears to provide financial security to farmers, it can also lead to greater insecurity as farmers become dependent on these companies for their livelihoods. Contract farming of export-oriented products such as flowers and gherkins also means that agricultural land is diverted from food grain production. Contract farming has sociological significance in that it disengages many people from the production process and makes their own indigenous knowledge of agriculture irrelevant. In addition, contract farming caters primarily to the production of elite items, and because it usually requires high doses of fertilisers and pesticides, it is often not ecologically sustainable.

Who decides the crop to be grown under contract farming?

1. Farmer
2. Tenants
3. Labourer
4. Company

Options :

485584135329. 1
485584135330. 2
485584135331. 3
485584135332. 4

Question Number : 519 Question Id : 48558433834 Question Type : MCQ Option Shuffling : No Is Question Mandatory : No Calculator : None Response Time : N.A Think Time : N.A Minimum Instruction Time : 0

Correct Marks : 5 Wrong Marks : 1

Question Key Details :

Key	Value
Comprehension	Comp2

Read the passage and answer the following questions:

These are indicators of the process of globalisation of agriculture, or the incorporation of agriculture into the larger global market - a process that has had direct effects on farmers and rural society. For instance, in some regions such as Punjab and Karnataka, farmers enter into contracts with multinational companies (such as PepsiCo) to grow certain crops (such as tomatoes and potatoes), which the companies then buy from them for processing or export. In such 'contract farming' systems, the company identifies the crops to be grown, provides the seeds and other inputs, as well as the knowhow and often also the working capital. In return, the farmer is assured of a market because the company guarantees that it will purchase the produce at a predetermined fixed price. Contract farming is very common now in the production of specialised items such as cut flowers, fruits such as grapes, figs and pomegranates, cotton and oil seeds. While contract farming appears to provide financial security to farmers, it can also lead to greater insecurity as farmers become dependent on these companies for their livelihoods. Contract farming of export-oriented products such as flowers and gherkins also means that agricultural land is diverted from food grain production. Contract farming has sociological significance in that it disengages many people from the production process and makes their own indigenous knowledge of agriculture irrelevant. In addition, contract farming caters primarily to the production of elite items, and because it usually requires high doses of fertilisers and pesticides, it is often not ecologically sustainable.

Out of the following, which is not a demerit of contract farming?

1. Provides financial security to the farmer
2. Indigenous knowledge becomes irrelevant regarding agriculture
3. Ecologically not sustainable
4. Does not produce for the masses

Options :

485584135333. 1

485584135334. 2

485584135335. 3

485584135336. 4

Question Number : 520 Question Id : 48558433835 Question Type : MCQ Option Shuffling : No Is Question Mandatory : No Calculator : None Response Time : N.A Think Time : N.A Minimum Instruction Time : 0

Correct Marks : 5 Wrong Marks : 1

Question Key Details :

Key	Value
Comprehension	Comp2

Read the passage and answer the following questions:

These are indicators of the process of globalisation of agriculture, or the incorporation of agriculture into the larger global market - a process that has had direct effects on farmers and rural society. For instance, in some regions such as Punjab and Karnataka, farmers enter into contracts with multinational companies (such as PepsiCo) to grow certain crops (such as tomatoes and potatoes), which the companies then buy from them for processing or export. In such 'contract farming' systems, the company identifies the crops to be grown, provides the seeds and other inputs, as well as the knowhow and often also the working capital. In return, the farmer is assured of a market because the company guarantees that it will purchase the produce at a predetermined fixed price. Contract farming is very common now in the production of specialised items such as cut flowers, fruits such as grapes, figs and pomegranates, cotton and oil seeds. While contract farming appears to provide financial security to farmers, it can also lead to greater insecurity as farmers become dependent on these companies for their livelihoods. Contract farming of export-oriented products such as flowers and gherkins also means that agricultural land is diverted from food grain production. Contract farming has sociological significance in that it disengages many people from the production process and makes their own indigenous knowledge of agriculture irrelevant. In addition, contract farming caters primarily to the production of elite items, and because it usually requires high doses of fertilisers and pesticides, it is often not ecologically sustainable.

The system described in the passage is possible due to which process?

1. Globalisation
2. Contract farming
3. Trans National Corporation
4. Glocalisation

Options :

485584135337. 1
485584135338. 2
485584135339. 3
485584135340. 4

General Test

Group Number :	13
Group Id :	485584751
Group Maximum Duration :	60
Group Minimum Duration :	60
Show Attended Group? :	No
Edit Attended Group? :	No
Break time :	0
Group Marks :	250
Is this Group for Examiner? :	No
Examiner permission :	Cant View
Show Progress Bar? :	No

General Test

Section Id : 485584869
Section Number : 1
Section type : Online
Mandatory or Optional : Mandatory
Number of Questions : 60
Number of Questions to be attempted : 50
Section Marks : 250
Enable Mark as Answered Mark for Review and Clear Response : Yes
Maximum Instruction Time : 0
Sub-Section Number : 1
Sub-Section Id : 4855842448
Question Shuffling Allowed : Yes
Is Section Default? : null

Question Number : 521 Question Id : 48558433886 Question Type : MCQ Option Shuffling : No Is Question Mandatory : No Calculator : None Response Time : N.A Think Time : N.A Minimum Instruction Time : 0

Correct Marks : 5 Wrong Marks : 1

Question Key Details :

Key	Value
Comprehension	MCQ

The C.P. of two shirts taken together is ₹910. If by selling one at a profit of 16% and the other at a loss of 12%, there is no loss or gain in the whole transaction, then the C.P. of the two shirts are respectively:

1. 380, 530
2. 370, 540
3. 390, 520
4. 400, 510

Options :

485584135541. 1
485584135542. 2
485584135543. 3
485584135544. 4

Question Number : 522 Question Id : 48558433887 Question Type : MCQ Option Shuffling : No Is Question Mandatory : No Calculator : None Response Time : N.A Think Time : N.A Minimum Instruction Time : 0

Correct Marks : 5 Wrong Marks : 1

Question Key Details :

Key	Value
Comprehension	MCQ

Heera purchased a bag for ₹4500 and sold it for ₹8,200. What is the profit percentage? (Correct to two places of decimal)

1. 82.22

2. 73.62

3. 45.12

4. 52.42

Options :

485584135545. 1

485584135546. 2

485584135547. 3

485584135548. 4

Question Number : 523 Question Id : 48558433888 Question Type : MCQ Option Shuffling : No Is Question Mandatory : No Calculator : None Response Time : N.A Think Time : N.A Minimum Instruction Time : 0

Correct Marks : 5 Wrong Marks : 1

Question Key Details :

Key	Value
Comprehension	MCQ

What is the value of ${}^{81}P_2 - {}^{81}C_2$?

1. 6480

2. 3240

3. 2775

4. 5040

Options :

485584135549. 1

485584135550. 2

485584135551. 3

485584135552. 4

Question Number : 524 Question Id : 48558433889 Question Type : MCQ Option Shuffling : No Is Question Mandatory : No Calculator : None Response Time : N.A Think Time : N.A Minimum Instruction Time : 0

Correct Marks : 5 Wrong Marks : 1

Question Key Details :

Key	Value
Comprehension	MCQ

If ${}^nC_9 = {}^nC_3$, what is n ?

1. 10
2. 11
3. 12
4. 13

Options :

485584135553. 1
485584135554. 2
485584135555. 3
485584135556. 4

Question Number : 525 Question Id : 48558433890 Question Type : MCQ Option Shuffling : No Is Question Mandatory : No Calculator : None Response Time : N.A Think Time : N.A Minimum Instruction Time : 0

Correct Marks : 5 Wrong Marks : 1

Question Key Details :

Key	Value
Comprehension	MCQ

The Curved Surface Area of a right circular cylinder of base radius r is obtained by multiplying its volume:

1. $2r^2$
2. $\frac{2}{r^2}$
3. $2r$
4. $\frac{2}{r}$

Options :

485584135557. 1
485584135558. 2
485584135559. 3
485584135560. 4

Question Number : 526 Question Id : 48558433891 Question Type : MCQ Option Shuffling : No Is Question Mandatory : No Calculator : None Response Time : N.A Think Time : N.A Minimum Instruction Time : 0

Correct Marks : 5 Wrong Marks : 1

Question Key Details :

Key	Value
Comprehension	MCQ

Match List I with List II

LIST I		LIST II	
A.	Volume of cone	I.	$\frac{1}{3}\pi h(r_1^2 + r_2^2 + r_1r_2)$
B.	Volume of sphere	II.	$\frac{4}{3}\pi r^3$
C.	Volume of Frustum	III.	$\frac{1}{3}\pi r^2 h$
D.	Volume of cylinder	IV.	$\pi r^2 h$

Choose the correct answer from the options given below:

1. A-IV, B-I, C-III, D-II
2. A-III, B-IV, C-II, D-I
3. A-I, B-II, C-III, D-IV
4. A-II, B-IV, C-I, D-III

Options :

485584135561. 1
485584135562. 2
485584135563. 3
485584135564. 4

Question Number : 527 Question Id : 48558433892 Question Type : MCQ Option Shuffling : No Is Question Mandatory : No Calculator : None Response Time : N.A Think Time : N.A Minimum Instruction Time : 0

Correct Marks : 5 Wrong Marks : 1

Question Key Details :

Key	Value
Comprehension	MCQ

A sum of money triples itself in 3 years at simple interest. In how many years will it become 9 times of itself?

1. 9 years
2. 10 years
3. 12 years
4. 8 years

Options :

485584135565. 1
485584135566. 2
485584135567. 3
485584135568. 4

Question Number : 528 Question Id : 48558433893 Question Type : MCQ Option Shuffling : No Is Question Mandatory : No Calculator : None Response Time : N.A Think Time : N.A Minimum Instruction Time : 0

Correct Marks : 5 Wrong Marks : 1

Question Key Details :

Key	Value
Comprehension	MCQ

At what rate of simple interest, a sum of ₹1,800 will become ₹2,700 in 10 years?

1. 10%
2. 6%
3. 6.75%
4. 5%

Options :

485584135569. 1
485584135570. 2
485584135571. 3
485584135572. 4

Question Number : 529 Question Id : 48558433894 Question Type : MCQ Option Shuffling : No Is Question Mandatory : No Calculator : None Response Time : N.A Think Time : N.A Minimum Instruction Time : 0

Correct Marks : 5 Wrong Marks : 1

Question Key Details :

Key	Value
Comprehension	MCQ

Where does the point P (-5, 0) lies?

1. Third quadrant
2. y-axis
3. x-axis
4. Fourth quadrant

Options :

485584135573. 1
485584135574. 2
485584135575. 3
485584135576. 4

Question Number : 530 Question Id : 48558433895 Question Type : MCQ Option Shuffling : No Is Question Mandatory : No Calculator : None Response Time : N.A Think Time : N.A Minimum Instruction Time : 0

Correct Marks : 5 Wrong Marks : 1

Question Key Details :

Key	Value
Comprehension	MCQ

If P, R, T are the areas of parallelogram, a rhombus and a triangle standing on the same base and between the same parallel lines, then which of the following is true?

1. $R < P < T$
2. $P > R > T$
3. $R = P = T$
4. $R = P = 2T$

Options :

485584135577. 1
485584135578. 2
485584135579. 3
485584135580. 4

Question Number : 531 Question Id : 48558433896 Question Type : MCQ Option Shuffling : No Is Question Mandatory : No Calculator : None Response Time : N.A Think Time : N.A Minimum Instruction Time : 0

Correct Marks : 5 Wrong Marks : 1

Question Key Details :

Key	Value
Comprehension	MCQ

Given expression:

$$\frac{(0.682)^2 - (0.318)^2}{0.682 - 0.318}$$

1. 2
2. 4
3. 1
4. 5

Options :

485584135581. 1
485584135582. 2
485584135583. 3
485584135584. 4

Question Number : 532 Question Id : 48558433897 Question Type : MCQ Option Shuffling : No Is Question Mandatory : No Calculator : None Response Time : N.A Think Time : N.A Minimum Instruction Time : 0

Correct Marks : 5 Wrong Marks : 1

Question Key Details :

Key	Value
Comprehension	MCQ

A man goes uphill with an average speed of 24 km/h and comes down with an average speed of 36 km/h. The distance travelled in both cases being the same. The average speed for the entire journey is:

1. 30 km/h
2. 28.8 km/h
3. 32 km/h
4. 45 km/h

Options :

485584135585. 1
485584135586. 2
485584135587. 3
485584135588. 4

Question Number : 533 Question Id : 48558433898 Question Type : MCQ Option Shuffling : No Is Question Mandatory : No Calculator : None Response Time : N.A Think Time : N.A Minimum Instruction Time : 0

Correct Marks : 5 Wrong Marks : 1

Question Key Details :

Key	Value
Comprehension	MCQ

A 300 m long train is moving at a speed of 60 km/h. In what time will it cross a single pole?

1. 25 sec
2. 30 sec
3. 18 sec
4. 12 sec

Options :

485584135589. 1
485584135590. 2
485584135591. 3
485584135592. 4

Question Number : 534 Question Id : 48558433899 Question Type : MCQ Option Shuffling : No Is Question Mandatory : No Calculator : None Response Time : N.A Think Time : N.A Minimum Instruction Time : 0

Correct Marks : 5 Wrong Marks : 1

Question Key Details :

Key	Value
Comprehension	MCQ

In a polyhedron, the number of faces is 4 and the number of edges is 6, then the number of vertices of that polyhedron is:

1. 1
2. 2
3. 3
4. 4

Options :

- 485584135593. 1
- 485584135594. 2
- 485584135595. 3
- 485584135596. 4

Question Number : 535 Question Id : 48558433900 Question Type : MCQ Option Shuffling : No Is Question Mandatory : No Calculator : None Response Time : N.A Think Time : N.A Minimum Instruction Time : 0

Correct Marks : 5 Wrong Marks : 1

Question Key Details :

Key	Value
Comprehension	MCQ

The number $0.4\overline{23}$ converted to a fraction, then it is equal to:

1. $\frac{1147}{300}$
2. $\frac{419}{900}$
3. $\frac{419}{990}$
4. $\frac{423}{100}$

Options :

- 485584135597. 1
- 485584135598. 2
- 485584135599. 3
- 485584135600. 4

Question Number : 536 Question Id : 48558433901 Question Type : MCQ Option Shuffling : No Is Question Mandatory : No Calculator : None Response Time : N.A Think Time : N.A Minimum Instruction Time : 0

Correct Marks : 5 Wrong Marks : 1

Question Key Details :

Key	Value
Comprehension	MCQ

Which of the following is called 'Trapezium'?

1. All the sides are equal
2. Two opposite parallel sides are equal
3. Two opposite sides are parallel and two opposite sides are non-parallel
4. A pair of adjacent sides are equal

Options :

485584135601. 1

485584135602. 2

485584135603. 3

485584135604. 4

Question Number : 537 Question Id : 48558433902 Question Type : MCQ Option Shuffling : No Is Question Mandatory : No Calculator : None Response Time : N.A Think Time : N.A Minimum Instruction Time : 0

Correct Marks : 5 Wrong Marks : 1

Question Key Details :

Key	Value
Comprehension	MCQ

From a well shuffled pack of 52 cards, three cards are drawn one by one. The probability that the three cards are Jack, Queen and King respectively?

1. $\frac{11}{1105}$

2. $\frac{8}{16575}$

3. $\frac{27}{2197}$

4. $\frac{27}{305}$

Options :

485584135605. 1

485584135606. 2

485584135607. 3

485584135608. 4

Question Number : 538 Question Id : 48558433903 Question Type : MCQ Option Shuffling : No Is Question Mandatory : No Calculator : None Response Time : N.A Think Time : N.A Minimum Instruction Time : 0

Correct Marks : 5 Wrong Marks : 1

Question Key Details :

Key	Value
Comprehension	MCQ

Two unbiased coins are tossed. What is the probability of getting one head and one tail?

1. $\frac{1}{2}$

2. $\frac{1}{3}$

3. $\frac{1}{4}$

4. 1

Options :

485584135609. 1

485584135610. 2

485584135611. 3

485584135612. 4

Question Number : 539 Question Id : 48558433904 Question Type : MCQ Option Shuffling : No Is Question Mandatory : No Calculator : None Response Time : N.A Think Time : N.A Minimum Instruction Time : 0

Correct Marks : 5 Wrong Marks : 1

Question Key Details :

Key	Value
Comprehension	MCQ

If the manufacturer gains 10%, the wholesale dealer gains 15% and the retailer gains 25%, then find the cost of production of a table, if the retail price of which is ₹1265?

1. ₹1000

2. ₹900

3. ₹800

4. ₹700

Options :

485584135613. 1

485584135614. 2

485584135615. 3

485584135616. 4

Question Number : 540 Question Id : 48558433905 Question Type : MCQ Option Shuffling : No Is Question Mandatory : No Calculator : None Response Time : N.A Think Time : N.A Minimum Instruction Time : 0

Correct Marks : 5 Wrong Marks : 1

Question Key Details :

Key	Value
Comprehension	MCQ

In what ratio must a shopkeeper mix peas and soyabean of ₹16 and ₹25 per kg respectively, so as to obtain a mixture of ₹19 per kg?

1. 2 : 1

2. 7 : 5

3. 11 : 7

4. 13 : 8

Options :

485584135617. 1

485584135618. 2

485584135619. 3

485584135620. 4

Question Number : 541 Question Id : 48558433906 Question Type : MCQ Option Shuffling : No Is Question Mandatory : No Calculator : None Response Time : N.A Think Time : N.A Minimum Instruction Time : 0

Correct Marks : 5 Wrong Marks : 1

Question Key Details :

Key	Value
Comprehension	MCQ

Find the missing term

1, 4, 27, 16, ?, 36, 343

1. 25

2. 87

3. 120

4. 125

Options :

485584135621. 1

485584135622. 2

485584135623. 3

485584135624. 4

Question Number : 542 Question Id : 48558433907 Question Type : MCQ Option Shuffling : No Is Question Mandatory : No Calculator : None Response Time : N.A Think Time : N.A Minimum Instruction Time : 0

Correct Marks : 5 Wrong Marks : 1

Question Key Details :

Key	Value
Comprehension	MCQ

From the given statements, what conclusion can be made?

Statements : Some men are wise
All wise are professors

Conclusion I : Some men are professors.
II : All professors are wise

1. Only I follows
2. Only II follows
3. I and II follows
4. Either I or II follows

Options :

- 485584135625. 1
- 485584135626. 2
- 485584135627. 3
- 485584135628. 4

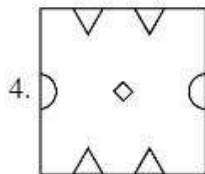
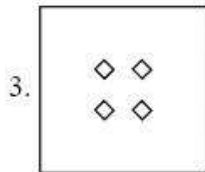
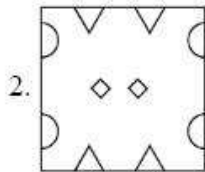
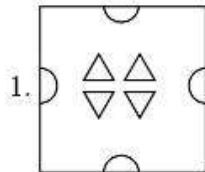
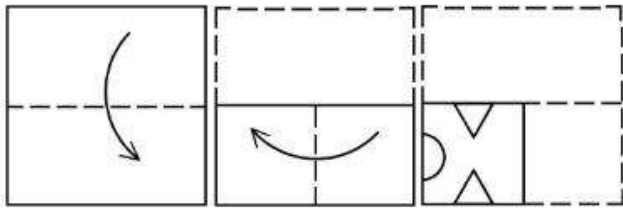
Question Number : 543 Question Id : 48558433908 Question Type : MCQ Option Shuffling : No Is Question Mandatory : No Calculator : None Response Time : N.A Think Time : N.A Minimum Instruction Time : 0

Correct Marks : 5 Wrong Marks : 1

Question Key Details :

Key	Value
Comprehension	MCQ

A piece of paper is folded and a cut is made as shown below. How it will appear when opened?



Options :

- 485584135629. 1
- 485584135630. 2
- 485584135631. 3
- 485584135632. 4

Question Number : 544 Question Id : 48558433909 Question Type : MCQ Option Shuffling : No Is Question Mandatory : No Calculator : None Response Time : N.A Think Time : N.A Minimum Instruction Time : 0

Correct Marks : 5 Wrong Marks : 1

Question Key Details :

Key	Value
Comprehension	MCQ

Manish goes 8 km in the North from his school. Now, turning to the left, he goes 15 km and again turns to the left and goes to 8 km. How far he is from his school and in which direction?

1. 15 km, South from school
2. 8 km, North from school
3. 8 km, West from school
4. 15 km, West from school

Options :

485584135633. 1
485584135634. 2
485584135635. 3
485584135636. 4

Question Number : 545 Question Id : 48558433910 Question Type : MCQ Option Shuffling : No Is Question Mandatory : No Calculator : None Response Time : N.A Think Time : N.A Minimum Instruction Time : 0

Correct Marks : 5 Wrong Marks : 1

Question Key Details :

Key	Value
Comprehension	MCQ

Among P, Q, R, S, T, each having different weight, R is heavier than only P and S is lighter than Q and heavier than T. Who among them is the heaviest?

1. P
2. Q
3. S
4. T

Options :

485584135637. 1
485584135638. 2
485584135639. 3
485584135640. 4

Question Number : 546 Question Id : 48558433911 Question Type : MCQ Option Shuffling : No Is Question Mandatory : No Calculator : None Response Time : N.A Think Time : N.A Minimum Instruction Time : 0

Correct Marks : 5 Wrong Marks : 1

Question Key Details :

Key	Value
Comprehension	MCQ

First two words are related in a certain way in:

Transition : Change :: Immobility : ?

Identify the suitable word in place of ? so that third and fourth words also become relatable the some manner.

1. Stillness
2. Liveliness
3. Action
4. Busyness

Options :

485584135641. 1
485584135642. 2
485584135643. 3
485584135644. 4

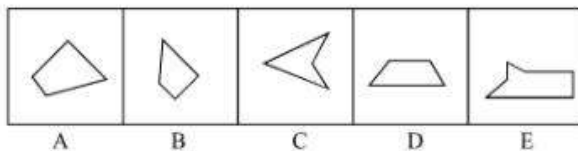
Question Number : 547 Question Id : 48558433912 Question Type : MCQ Option Shuffling : No Is Question Mandatory : No Calculator : None Response Time : N.A Think Time : N.A Minimum Instruction Time : 0

Correct Marks : 5 Wrong Marks : 1

Question Key Details :

Key	Value
Comprehension	MCQ

Which three of the given can be added to get a rectangular figure?



1. A, B, C
2. B, C, E
3. B, D, E
4. A, D, E

Options :

485584135645. 1
485584135646. 2
485584135647. 3
485584135648. 4

Question Number : 548 Question Id : 48558433913 Question Type : MCQ Option Shuffling : No Is Question Mandatory : No Calculator : None Response Time : N.A Think Time : N.A Minimum Instruction Time : 0

Correct Marks : 5 Wrong Marks : 1

Question Key Details :

Key	Value
-----	-------

January 11, 1997 was a Sunday. What day of the week was on January 7, 2000?

1. Sunday
2. Monday
3. Saturday
4. Tuesday

Options :

485584135649. 1
485584135650. 2
485584135651. 3
485584135652. 4


Question Number : 549 Question Id : 48558433914 Question Type : MCQ Option Shuffling : No Is Question Mandatory : No Calculator : None Response Time : N.A Think Time : N.A Minimum Instruction Time : 0

Correct Marks : 5 Wrong Marks : 1

Question Key Details :

Key	Value
Comprehension	MCQ

Choose the correct mirror image of the following:



1 2 3 4

1. 1
2. 2
3. 3
4. 4

Options :

485584135653. 1
485584135654. 2
485584135655. 3
485584135656. 4

Question Number : 550 Question Id : 48558433915 Question Type : MCQ Option Shuffling : No Is Question Mandatory : No Calculator : None Response Time : N.A Think Time : N.A Minimum Instruction Time : 0

Correct Marks : 5 Wrong Marks : 1

Question Key Details :

Key	Value
Comprehension	MCQ

Choose odd one out from the following:

1. Copper
2. Iron
3. Aluminium
4. Bromine

Options :

485584135657. 1
485584135658. 2
485584135659. 3
485584135660. 4

Question Number : 551 Question Id : 48558433916 Question Type : MCQ Option Shuffling : No Is Question Mandatory : No Calculator : None Response Time : N.A Think Time : N.A Minimum Instruction Time : 0

Correct Marks : 5 Wrong Marks : 1

Question Key Details :

Key	Value
Comprehension	MCQ

Study the following sequence and then answer the question given below:

9 H 7 Z A 9 2 B C H 3 1 X W V 5 T 4 M 6 0 Q 8 F J.

If every fourth letter/number in the above sequence starting from 7 is eliminated, which of the following will be fifth letter/number to the left of the 12th position from your right?

1. H
2. Z
3. A
4. C

Options :

485584135661. 1
485584135662. 2
485584135663. 3
485584135664. 4

Question Number : 552 Question Id : 48558433917 Question Type : MCQ Option Shuffling : No Is Question Mandatory : No Calculator : None Response Time : N.A Think Time : N.A Minimum Instruction Time : 0

Correct Marks : 5 Wrong Marks : 1

Question Key Details :

Key	Value
-----	-------

Comprehension	MCQ
---------------	-----

If you are head of your office, some media people come to your office and request you brief them about the pension plan of your office, you will:

1. Ask the media people to come some other day
2. Immediately accept the offer and brief them
3. Get them turned out of your office
4. Ask them to wait and to consult the official concerned

Options :

- 485584135665. 1
- 485584135666. 2
- 485584135667. 3
- 485584135668. 4

Question Number : 553 Question Id : 48558433918 Question Type : MCQ Option Shuffling : No Is Question Mandatory : No Calculator : None Response Time : N.A Think Time : N.A Minimum Instruction Time : 0

Correct Marks : 5 Wrong Marks : 1

Question Key Details :

Key	Value
Comprehension	MCQ

In a certain code, COMPUTER is coded as ETUPMOCR. How is INACTIVE written in the same code?

1. VITCANIE
2. VICTNAII
3. VICTANIF
4. VITCANIG

Options :

- 485584135669. 1
- 485584135670. 2
- 485584135671. 3
- 485584135672. 4

Question Number : 554 Question Id : 48558433919 Question Type : MCQ Option Shuffling : No Is Question Mandatory : No Calculator : None Response Time : N.A Think Time : N.A Minimum Instruction Time : 0

Correct Marks : 5 Wrong Marks : 1

Question Key Details :

Key	Value
Comprehension	MCQ

Select the figure from amongst the four alternatives, which when place in the blank space would complete the pattern?

×		×		×	
	×		×		×
×		×		×	
#		#			
	#				
#		#			

1.

#	#	#
	#	

2.

	#	
#		#
	#	

3.

#		#
#		#

4.

	#	
	#	
	#	

Options :

- 485584135673. 1
- 485584135674. 2
- 485584135675. 3
- 485584135676. 4

Question Number : 555 Question Id : 48558433920 Question Type : MCQ Option Shuffling : No Is Question Mandatory : No Calculator : None Response Time : N.A Think Time : N.A Minimum Instruction Time : 0

Correct Marks : 5 Wrong Marks : 1

Question Key Details :

Key	Value
Comprehension	MCQ

Rajni ranked 9th from the top and 38th from the bottom in a class. How many students are there in the class?

- 1. 46
- 2. 47
- 3. 45
- 4. 44

Options :

- 485584135677. 1
- 485584135678. 2
- 485584135679. 3
- 485584135680. 4

Question Number : 556 Question Id : 48558433921 Question Type : MCQ Option Shuffling : No Is Question Mandatory : No Calculator : None Response Time : N.A Think Time : N.A Minimum Instruction Time : 0

Correct Marks : 5 Wrong Marks : 1

Question Key Details :

Key	Value
Comprehension	MCQ

The following two numbers are connected by some relationship:

82 : 9

Identify the suitable pair to which the same relationship is applicable.

- 1. 5 : 26
- 2. 6 : 37
- 3. 35 : 6
- 4. 26 : 5

Options :

- 485584135681. 1
- 485584135682. 2
- 485584135683. 3
- 485584135684. 4

Question Number : 557 Question Id : 48558433922 Question Type : MCQ Option Shuffling : No Is Question Mandatory : No Calculator : None Response Time : N.A Think Time : N.A Minimum Instruction Time : 0

Correct Marks : 5 Wrong Marks : 1

Question Key Details :

Key	Value
Comprehension	MCQ

P and Q are married couple. A and B are brothers. A is the brother of P. How is B related to Q?

1. Brother-in-law
2. Cousin
3. Son
4. Brother

Options :

- 485584135685. 1
- 485584135686. 2
- 485584135687. 3
- 485584135688. 4

Question Number : 558 Question Id : 48558433923 Question Type : MCQ Option Shuffling : No Is Question Mandatory : No Calculator : None Response Time : N.A Think Time : N.A Minimum Instruction Time : 0

Correct Marks : 5 Wrong Marks : 1

Question Key Details :

Key	Value
Comprehension	MCQ

Below mentioned question consists of a statement followed by two arguments I and II.

Statement : Should 'education' be brought under the control of the Central Government like defence?

Argument I : No. Education is a state subject and it should remain with state.

II : Yes. This is the only way to establish uniformity in a growth of education across the states.

1. Only argument I is strong
2. Only argument II is strong.
3. Either I or II is strong
4. Neither I nor II is strong

Options :

- 485584135689. 1
- 485584135690. 2
- 485584135691. 3
- 485584135692. 4

Question Number : 559 Question Id : 48558433924 Question Type : MCQ Option Shuffling : No Is Question Mandatory : No Calculator : None Response Time : N.A Think Time : N.A Minimum Instruction Time : 0

Correct Marks : 5 Wrong Marks : 1

Question Key Details :

Key	Value
Comprehension	MCQ

Choose the correct option on the basis of the following statements and conclusions.

Statement : Morning walks are good for health.

Conclusion I : All healthy people go for morning walks.

II : Evening walks are harmful.

1. Only conclusion I follow
2. Only conclusion II follow
3. Both I and II follow
4. Neither I nor II follow

Options :

485584135693. 1

485584135694. 2

485584135695. 3

485584135696. 4

Question Number : 560 Question Id : 48558433925 Question Type : MCQ Option Shuffling : No Is Question Mandatory : No Calculator : None Response Time : N.A Think Time : N.A Minimum Instruction Time : 0

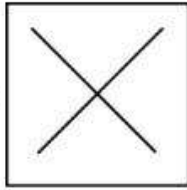
Correct Marks : 5 Wrong Marks : 1

Question Key Details :

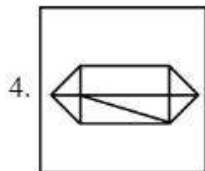
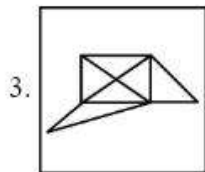
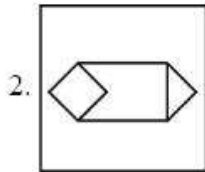
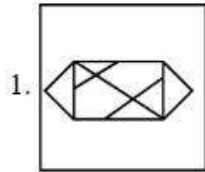
Key	Value
Comprehension	MCQ

In which option problem figure is embedded :

Problem Figure :



Answer Figure:



Options :

485584135697. 1

485584135698. 2

485584135699. 3

485584135700. 4

Question Number : 561 Question Id : 48558433926 Question Type : MCQ Option Shuffling : No Is Question Mandatory : No Calculator : None Response Time : N.A Think Time : N.A Minimum Instruction Time : 0

Correct Marks : 5 Wrong Marks : 1

Question Key Details :

Key	Value
Comprehension	MCQ

Which city does not have Jantar Mantar observatories built by Jai Singh II in the early 18th century?

1. Jaipur
2. New Delhi
3. Agra
4. Ujjain

Options :

485584135701. 1
485584135702. 2
485584135703. 3
485584135704. 4

Question Number : 562 Question Id : 48558433927 Question Type : MCQ Option Shuffling : No Is Question Mandatory : No Calculator : None Response Time : N.A Think Time : N.A Minimum Instruction Time : 0

Correct Marks : 5 Wrong Marks : 1

Question Key Details :

Key	Value
Comprehension	MCQ

Who founded the Pala empire?

1. Dharpala
2. Gopala
3. Jayadeva
4. Senpala

Options :

485584135705. 1
485584135706. 2
485584135707. 3
485584135708. 4

Question Number : 563 Question Id : 48558433928 Question Type : MCQ Option Shuffling : No Is Question Mandatory : No Calculator : None Response Time : N.A Think Time : N.A Minimum Instruction Time : 0

Correct Marks : 5 Wrong Marks : 1

Question Key Details :

Key	Value
Comprehension	MCQ

Alai Darwaja was built by:

1. Muhammad - bin - Tughlaq
2. Ala-ud-din Khilji
3. Amir Khusro
4. Iltilthmish

Options :

- 485584135709. 1
- 485584135710. 2
- 485584135711. 3
- 485584135712. 4

Question Number : 564 Question Id : 48558433929 Question Type : MCQ Option Shuffling : No Is Question Mandatory : No Calculator : None Response Time : N.A Think Time : N.A Minimum Instruction Time : 0

Correct Marks : 5 Wrong Marks : 1

Question Key Details :

Key	Value
Comprehension	MCQ

Who found 'Ramakrishna Mission'?

1. Mahatma Gandhi
2. B.R. Ambedkar
3. Swami Vivekananda
4. Swami Dayanand Saraswati

Options :

- 485584135713. 1
- 485584135714. 2
- 485584135715. 3
- 485584135716. 4

Question Number : 565 Question Id : 48558433930 Question Type : MCQ Option Shuffling : No Is Question Mandatory : No Calculator : None Response Time : N.A Think Time : N.A Minimum Instruction Time : 0

Correct Marks : 5 Wrong Marks : 1

Question Key Details :

Key	Value
Comprehension	MCQ

One light year is equals to _____.

1. 9.46×10^{12} km
2. 1.12×10^{10} km
3. 9.00×10^8 km
4. 9.42×10^9 km

Options :

485584135717. 1
485584135718. 2
485584135719. 3
485584135720. 4

Question Number : 566 Question Id : 48558433931 Question Type : MCQ Option Shuffling : No Is Question Mandatory : No Calculator : None Response Time : N.A Think Time : N.A Minimum Instruction Time : 0

Correct Marks : 5 Wrong Marks : 1

Question Key Details :

Key	Value
Comprehension	MCQ

What is scientific name of 'Horse'?

1. Felis catus
2. Capra hercus
3. Eqqus caballus
4. Nija naja

Options :

485584135721. 1
485584135722. 2
485584135723. 3
485584135724. 4

Question Number : 567 Question Id : 48558433932 Question Type : MCQ Option Shuffling : No Is Question Mandatory : No Calculator : None Response Time : N.A Think Time : N.A Minimum Instruction Time : 0

Correct Marks : 5 Wrong Marks : 1

Question Key Details :

Key	Value
Comprehension	MCQ

The change of gaseous state directly to solid state without going through liquid state is called _____.

1. Soildification
2. Sublimation
3. Deposition
4. Evaporation

Options :

485584135725. 1
485584135726. 2
485584135727. 3
485584135728. 4

Question Number : 568 Question Id : 48558433933 Question Type : MCQ Option Shuffling : No Is Question Mandatory : No Calculator : None Response Time : N.A Think Time : N.A Minimum Instruction Time : 0

Correct Marks : 5 Wrong Marks : 1

Question Key Details :

Key	Value
Comprehension	MCQ

Who among the following in Ancient India made some prominent discoveries in Physics?

1. Sushruta
2. Charaka
3. Kanada
4. Nagarjuna

Options :

485584135729. 1
485584135730. 2
485584135731. 3
485584135732. 4

Question Number : 569 Question Id : 48558433934 Question Type : MCQ Option Shuffling : No Is Question Mandatory : No Calculator : None Response Time : N.A Think Time : N.A Minimum Instruction Time : 0

Correct Marks : 5 Wrong Marks : 1

Question Key Details :

Key	Value
Comprehension	MCQ

Honourable Prime Minister of India has led the foundation for manufacturing plant of C-295 Aircraft at _____.

1. Gandhi Nagar
2. Rajkot
3. Surat
4. Vadodara

Options :

485584135733. 1
485584135734. 2
485584135735. 3
485584135736. 4

Question Number : 570 Question Id : 48558433935 Question Type : MCQ Option Shuffling : No Is Question Mandatory : No Calculator : None Response Time : N.A Think Time : N.A Minimum Instruction Time : 0

Correct Marks : 5 Wrong Marks : 1

Question Key Details :

Key	Value
Comprehension	MCQ

In 2022, National conference on e-governance was held in _____.

1. Mumbai
2. Goa
3. New Delhi
4. Kolkata

Options :

485584135737. 1
485584135738. 2
485584135739. 3
485584135740. 4

Question Number : 571 Question Id : 48558433936 Question Type : MCQ Option Shuffling : No Is Question Mandatory : No Calculator : None Response Time : N.A Think Time : N.A Minimum Instruction Time : 0

Correct Marks : 5 Wrong Marks : 1

Question Key Details :

Key	Value
Comprehension	MCQ

Naftali Bennett was sworn in as Israel's new Prime Minister on:

1. June 13, 2021
2. May 10, 2021
3. April 20, 2021
4. February, 2021

Options :

- 485584135741. 1
- 485584135742. 2
- 485584135743. 3
- 485584135744. 4

Question Number : 572 Question Id : 48558433937 Question Type : MCQ Option Shuffling : No Is Question Mandatory : No Calculator : None Response Time : N.A Think Time : N.A Minimum Instruction Time : 0

Correct Marks : 5 Wrong Marks : 1

Question Key Details :

Key	Value
Comprehension	MCQ

Which of the following country become 11th member of ASEAN?

1. Vietnam
2. East Timor
3. Philippines
4. Laos

Options :

- 485584135745. 1
- 485584135746. 2
- 485584135747. 3
- 485584135748. 4

Question Number : 573 Question Id : 48558433938 Question Type : MCQ Option Shuffling : No Is Question Mandatory : No Calculator : None Response Time : N.A Think Time : N.A Minimum Instruction Time : 0

Correct Marks : 5 Wrong Marks : 1

Question Key Details :

Key	Value
Comprehension	MCQ

Which of the following cities is known as the 'Cashew Capital of the World'?

1. Kozhikode
2. Kurnool
3. Kumbakonam
4. Kollam

Options :

485584135749. 1
485584135750. 2
485584135751. 3
485584135752. 4

Question Number : 574 Question Id : 48558433939 Question Type : MCQ Option Shuffling : No Is Question Mandatory : No Calculator : None Response Time : N.A Think Time : N.A Minimum Instruction Time : 0

Correct Marks : 5 Wrong Marks : 1

Question Key Details :

Key	Value
Comprehension	MCQ

Laterite soil is formed due to intense leaching. Red laterite soil in Kerala is more suitable for:

1. Wheat
2. Paddy
3. Cashew nut
4. Cotton

Options :

485584135753. 1
485584135754. 2
485584135755. 3
485584135756. 4

Question Number : 575 Question Id : 48558433940 Question Type : MCQ Option Shuffling : No Is Question Mandatory : No Calculator : None Response Time : N.A Think Time : N.A Minimum Instruction Time : 0

Correct Marks : 5 Wrong Marks : 1

Question Key Details :

Key	Value
Comprehension	MCQ

Smallest planet of solar system is?

1. Venus
2. Mercury
3. Uranus
4. Neptune

Options :

485584135757. 1
485584135758. 2
485584135759. 3
485584135760. 4

Question Number : 576 Question Id : 48558433941 Question Type : MCQ Option Shuffling : No Is Question Mandatory : No Calculator : None Response Time : N.A Think Time : N.A Minimum Instruction Time : 0

Correct Marks : 5 Wrong Marks : 1

Question Key Details :

Key	Value
Comprehension	MCQ

The number of seats for Lok Sabha from Himachal Pradesh is:

1. 4
2. 14
3. 24
4. 5

Options :

485584135761. 1
485584135762. 2
485584135763. 3
485584135764. 4

Question Number : 577 Question Id : 48558433942 Question Type : MCQ Option Shuffling : No Is Question Mandatory : No Calculator : None Response Time : N.A Think Time : N.A Minimum Instruction Time : 0

Correct Marks : 5 Wrong Marks : 1

Question Key Details :

Key	Value
Comprehension	MCQ

Which of the following generates maximum employment in India?

1. Secondary section
2. Primary section
3. Railways
4. Tertiary section

Options :

485584135765. 1
485584135766. 2
485584135767. 3
485584135768. 4

Question Number : 578 Question Id : 48558433943 Question Type : MCQ Option Shuffling : No Is Question Mandatory : No Calculator : None Response Time : N.A Think Time : N.A Minimum Instruction Time : 0

Correct Marks : 5 Wrong Marks : 1

Question Key Details :

Key	Value
Comprehension	MCQ

The book "Mind Master: Winning Lessons from a Champion's Life" is about whom amongst the following?

1. Viswanathan Anand
2. M.S. Dhoni
3. Virat Kohli
4. Sachin Tendulkar

Options :

485584135769. 1
485584135770. 2
485584135771. 3
485584135772. 4

Question Number : 579 Question Id : 48558433944 Question Type : MCQ Option Shuffling : No Is Question Mandatory : No Calculator : None Response Time : N.A Think Time : N.A Minimum Instruction Time : 0

Correct Marks : 5 Wrong Marks : 1

Question Key Details :

Key	Value
Comprehension	MCQ

The place where ISRO organised 'Human Spaceflight Expo'?

1. Ahmedabad
2. Bengaluru
3. Thiruvananthapuram
4. Mumbai

Options :

485584135773. 1
485584135774. 2
485584135775. 3
485584135776. 4

Question Number : 580 Question Id : 48558433945 Question Type : MCQ Option Shuffling : No Is Question Mandatory : No Calculator : None Response Time : N.A Think Time : N.A Minimum Instruction Time : 0

Correct Marks : 5 Wrong Marks : 1

Question Key Details :

Key	Value
Comprehension	MCQ

Who among the following used the term 'Green Revolution' for increasing agricultural production in India?

1. Norman Borlaug
2. M.S. Swaminathan
3. Raj Krishna
4. R.K.V. Rao

Options :

485584135777. 1
485584135778. 2
485584135779. 3
485584135780. 4

Urdu

Group Number :	14
Group Id :	485584752
Group Maximum Duration :	45
Group Minimum Duration :	45
Show Attended Group? :	No
Edit Attended Group? :	No
Break time :	0
Group Marks :	200
Is this Group for Examiner? :	No
Examiner permission :	Cant View
Show Progress Bar? :	No

Urdu

Section Id :	485584870
Section Number :	1
Section type :	Online
Mandatory or Optional :	Mandatory
Number of Questions :	50
Number of Questions to be attempted :	40
Section Marks :	200
Enable Mark as Answered Mark for Review and Clear Response :	Yes
Maximum Instruction Time :	0
Sub-Section Number :	1
Sub-Section Id :	4855842449
Question Shuffling Allowed :	No
Is Section Default? :	null
Sub-Section Number :	2
Sub-Section Id :	4855842450
Question Shuffling Allowed :	Yes
Is Section Default? :	null
Sub-Section Number :	3
Sub-Section Id :	4855842451
Question Shuffling Allowed :	No
Is Section Default? :	null
Sub-Section Number :	4
Sub-Section Id :	4855842452
Question Shuffling Allowed :	No
Is Section Default? :	null
Sub-Section Number :	5
Sub-Section Id :	4855842453
Question Shuffling Allowed :	Yes
Is Section Default? :	null