

# National Testing Agency

**Question Paper Name :** 18S1  
**Subject Name :** 18Jun2023 Shift1 Subject Combination 1  
**Creation Date :** 2023-06-18 15:55:18  
**Duration :** 645  
**Total Marks :** 2850  
**Display Marks:** Yes

## English

**Group Number :** 1  
**Group Id :** 485584739  
**Group Maximum Duration :** 45  
**Group Minimum Duration :** 45  
**Show Attended Group? :** No  
**Edit Attended Group? :** No  
**Break time :** 0  
**Group Marks :** 200  
**Is this Group for Examiner? :** No  
**Examiner permission :** Cant View  
**Show Progress Bar? :** No

## English

**Section Id :** 485584853  
**Section Number :** 1  
**Section type :** Online  
**Mandatory or Optional :** Mandatory  
**Number of Questions :** 50  
**Number of Questions to be attempted :** 40  
**Section Marks :** 200  
**Enable Mark as Answered Mark for Review and Clear Response :** Yes  
**Maximum Instruction Time :** 0  
**Sub-Section Number :** 1  
**Sub-Section Id :** 4855842402  
**Question Shuffling Allowed :** No  
**Is Section Default? :** null

**Question Number : 1 Question Id : 48558433166 Question Type : MCQ Option Shuffling : No Is Question Mandatory : No Calculator : None Response Time : N.A Think Time : N.A Minimum Instruction Time : 0**

**Correct Marks : 5 Wrong Marks : 1**

**Question Key Details :**

Key	Value
Comprehension	Comp1

Unquestionably a literary life is for the most part an unhappy life; because, if you have genius, you must suffer the penalty of genius; and if you have only talent, there are so many cares and worries incidental to the circumstances of men of letters, as to make life exceedingly miserable. Besides the pangs of composition, and the continuous disappointment which a trues artist feels at his inability to reveal himself, there is the ever-recurring difficulty of gaining the public ear. Young writers are buoyed up by the hope and the belief that they have only to print to be acknowledged at once as a new light in literature. You can never convince a young author that the editors of magazines and the publishers of books are a practical body of men, who are by no means frantically anxious about placing the best literature before the public. Nay, that for the most part they are mere brokers, who conduct their business on the hardest lines of a Profit and Loss account. But supposing your book fairly launches, its perils, are only beginning. You have to run the gauntlet of the critics. To a young author, again, this seems to be as terrible on ordeal as passing down the files of Sioux or Comanche Indians, each one of whom is thirsting for your scalp. When you are a little older, you will find that criticism is not much more serious than the bye-play of clowns in a circus, when they beat around the ring the victim with bladders slung at the end of long poles. A time comes in the life of every author when he regards critics as comical rather than formidable, and goes his way unheeding. But there are sensitive souls that yield under the chastisement and, perhaps after suffering much silent torture, abandon the profession of the pen for ever, Keats, perhaps, is the saddest example of a fine spirit hounded to death by savage criticism; because, whatever his biographers may aver, that furious attack of Gifford and Terry undoubtedly expediated his death. But no doubt there are hundreds who suffer keenly hostile and unscrupulous criticism, and who have to bear that suffering in silence, because it is a cardinal principle in literature that the most unwise thing in the world for an author is to take public notice of criticism in the way of defending himself. Silence is the only safeguard, as it is the only dignified protest against insult and offence.

Why is the literary life mostly an unhappy one?

1. Most people don't understand literary people
2. They have to suffer the penalty of genius
3. Literary life is not about richness
4. They do not get the publishers easily

**Options :**

- 485584132661. 1
- 485584132662. 2
- 485584132663. 3
- 485584132664. 4

**Question Number : 2 Question Id : 48558433167 Question Type : MCQ Option Shuffling : No Is Question Mandatory : No Calculator : None Response Time : N.A Think Time : N.A Minimum Instruction Time : 0**

**Correct Marks : 5 Wrong Marks : 1**

**Question Key Details :**

Key	Value
Comprehension	Comp1

Unquestionably a literary life is for the most part an unhappy life; because, if you have genius, you must suffer the penalty of genius; and if you have only talent, there are so many cares and worries incidental to the circumstances of men of letters, as to make life exceedingly miserable. Besides the pangs of composition, and the continuous disappointment which a trues artist feels at his inability to reveal himself, there is the ever-recurring difficulty of gaining the public ear. Young writers are buoyed up by the hope and the belief that they have only to print to be acknowledged at once as a new light in literature. You can never convince a young author that the editors of magazines and the publishers of books are a practical body of men, who are by no means frantically anxious about placing the best literature before the public. Nay, that for the most part they are mere brokers, who conduct their business on the hardest lines of a Profit and Loss account. But supposing your book fairly launches, its perils, are only beginning. You have to run the gauntlet of the critics. To a young author, again, this seems to be as terrible on ordeal as passing down the files of Sioux or Comanche Indians, each one of whom is thirsting for your scalp. When you are a little older, you will find that criticism is not much more serious than the bye-play of clowns in a circus, when they beat around the ring the victim with bladders slung at the end of long poles. A time comes in the life of every author when he regards critics as comical rather than formidable, and goes his way unheeding. But there are sensitive souls that yield under the chastisement and, perhaps after suffering much silent torture, abandon the profession of the pen for ever, Keats, perhaps, is the saddest example of a fine spirit hounded to death by savage criticism; because, whatever his biographers may aver, that furious attack of Gifford and Terry undoubtedly expediated his death. But no doubt there are hundreds who suffer keenly hostile and unscrupulous criticism, and who have to bear that suffering in silence, because it is a cardinal principle in literature that the most unwise thing in the world for an author is to take public notice of criticism in the way of defending himself. Silence is the only safeguard, as it is the only dignified protest against insult and offence.

What is the ambition of a young author?

1. To create big name in the literary world
2. To achieve name and fame instantly
3. To create a big dent in the knowledge world
4. To dislodge other big names in the literary world

**Options :**

- 485584132665. 1
- 485584132666. 2
- 485584132667. 3
- 485584132668. 4

**Question Number : 3 Question Id : 48558433168 Question Type : MCQ Option Shuffling : No Is Question Mandatory : No Calculator : None Response Time : N.A Think Time : N.A Minimum Instruction Time : 0**

**Correct Marks : 5 Wrong Marks : 1**

**Question Key Details :**

Key	Value
Comprehension	Comp1

Unquestionably a literary life is for the most part an unhappy life; because, if you have genius, you must suffer the penalty of genius; and if you have only talent, there are so many cares and worries incidental to the circumstances of men of letters, as to make life exceedingly miserable. Besides the pangs of composition, and the continuous disappointment which a trues artist feels at his inability to reveal himself, there is the ever-recurring difficulty of gaining the public ear. Young writers are buoyed up by the hope and the belief that they have only to print to be acknowledged at once as a new light in literature. You can never convince a young author that the editors of magazines and the publishers of books are a practical body of men, who are by no means frantically anxious about placing the best literature before the public. Nay, that for the most part they are mere brokers, who conduct their business on the hardest lines of a Profit and Loss account. But supposing your book fairly launches, its perils, are only beginning. You have to run the gauntlet of the critics. To a young author, again, this seems to be as terrible on ordeal as passing down the files of Sioux or Comanche Indians, each one of whom is thirsting for your scalp. When you are a little older, you will find that criticism is not much more serious than the bye-play of clowns in a circus, when they beat around the ring the victim with bladders slung at the end of long poles. A time comes in the life of every author when he regards critics as comical rather than formidable, and goes his way unheeding. But there are sensitive souls that yield under the chastisement and, perhaps after suffering much silent torture, abandon the profession of the pen for ever, Keats, perhaps, is the saddest example of a fine spirit hounded to death by savage criticism; because, whatever his biographers may aver, that furious attack of Gifford and Terry undoubtedly expediated his death. But no doubt there are hundreds who suffer keenly hostile and unscrupulous criticism, and who have to bear that suffering in silence, because it is a cardinal principle in literature that the most unwise thing in the world for an author is to take public notice of criticism in the way of defending himself. Silence is the only safeguard, as it is the only dignified protest against insult and offence.

What is the general response of the editors and publishers towards young authors?

1. They are very sympathetic
2. They are very hostile
3. They are very welcoming
4. They are highly indifferent

**Options :**

- 485584132669. 1
- 485584132670. 2
- 485584132671. 3
- 485584132672. 4

**Question Number : 4 Question Id : 48558433169 Question Type : MCQ Option Shuffling : No Is Question Mandatory : No Calculator : None Response Time : N.A Think Time : N.A Minimum Instruction Time : 0**

**Correct Marks : 5 Wrong Marks : 1**

**Question Key Details :**

Key	Value
Comprehension	Comp1

Unquestionably a literary life is for the most part an unhappy life; because, if you have genius, you must suffer the penalty of genius; and if you have only talent, there are so many cares and worries incidental to the circumstances of men of letters, as to make life exceedingly miserable. Besides the pangs of composition, and the continuous disappointment which a trues artist feels at his inability to reveal himself, there is the ever-recurring difficulty of gaining the public ear. Young writers are buoyed up by the hope and the belief that they have only to print to be acknowledged at once as a new light in literature. You can never convince a young author that the editors of magazines and the publishers of books are a practical body of men, who are by no means frantically anxious about placing the best literature before the public. Nay, that for the most part they are mere brokers, who conduct their business on the hardest lines of a Profit and Loss account. But supposing your book fairly launches, its perils, are only beginning. You have to run the gauntlet of the critics. To a young author, again, this seems to be as terrible on ordeal as passing down the files of Sioux or Comanche Indians, each one of whom is thirsting for your scalp. When you are a little older, you will find that criticism is not much more serious than the bye-play of clowns in a circus, when they beat around the ring the victim with bladders slung at the end of long poles. A time comes in the life of every author when he regards critics as comical rather than formidable, and goes his way unheeding. But there are sensitive souls that yield under the chastisement and, perhaps after suffering much silent torture, abandon the profession of the pen for ever, Keats, perhaps, is the saddest example of a fine spirit hounded to death by savage criticism; because, whatever his biographers may aver, that furious attack of Gifford and Terry undoubtedly expediated his death. But no doubt there are hundreds who suffer keenly hostile and unscrupulous criticism, and who have to bear that suffering in silence, because it is a cardinal principle in literature that the most unwise thing in the world for an author is to take public notice of criticism in the way of defending himself. Silence is the only safeguard, as it is the only dignified protest against insult and offence.

What attitude should an author adopt in the face of bitter critics?

1. All criticism should be accepted nicely.
2. All criticism should be rejected.
3. All criticism should be written about.
4. Silence is the best response.

**Options :**

- 485584132673. 1
- 485584132674. 2
- 485584132675. 3
- 485584132676. 4

**Question Number : 5 Question Id : 48558433170 Question Type : MCQ Option Shuffling : No Is Question Mandatory : No Calculator : None Response Time : N.A Think Time : N.A Minimum Instruction Time : 0**

**Correct Marks : 5 Wrong Marks : 1**

**Question Key Details :**

Key	Value
Comprehension	Comp1

Unquestionably a literary life is for the most part an unhappy life; because, if you have genius, you must suffer the penalty of genius; and if you have only talent, there are so many cares and worries incidental to the circumstances of men of letters, as to make life exceedingly miserable. Besides the pangs of composition, and the continuous disappointment which a trues artist feels at his inability to reveal himself, there is the ever-recurring difficulty of gaining the public ear. Young writers are buoyed up by the hope and the belief that they have only to print to be acknowledged at once as a new light in literature. You can never convince a young author that the editors of magazines and the publishers of books are a practical body of men, who are by no means frantically anxious about placing the best literature before the public. Nay, that for the most part they are mere brokers, who conduct their business on the hardest lines of a Profit and Loss account. But supposing your book fairly launches, its perils, are only beginning. You have to run the gauntlet of the critics. To a young author, again, this seems to be as terrible on ordeal as passing down the files of Sioux or Comanche Indians, each one of whom is thirsting for your scalp. When you are a little older, you will find that criticism is not much more serious than the bye-play of clowns in a circus, when they beat around the ring the victim with bladders slung at the end of long poles. A time comes in the life of every author when he regards critics as comical rather than formidable, and goes his way unheeding. But there are sensitive souls that yield under the chastisement and, perhaps after suffering much silent torture, abandon the profession of the pen for ever, Keats, perhaps, is the saddest example of a fine spirit hounded to death by savage criticism; because, whatever his biographers may aver, that furious attack of Gifford and Terry undoubtedly expediated his death. But no doubt there are hundreds who suffer keenly hostile and unscrupulous criticism, and who have to bear that suffering in silence, because it is a cardinal principle in literature that the most unwise thing in the world for an author is to take public notice of criticism in the way of defending himself. Silence is the only safeguard, as it is the only dignified protest against insult and offence.

Explain "Abandon the profession of pen"

1. Publishing sector
2. literary life
3. Pen-making Industry
4. The world of critics

**Options :**

- 485584132677. 1
- 485584132678. 2
- 485584132679. 3
- 485584132680. 4

**Sub-Section Number :** 2  
**Sub-Section Id :** 4855842403  
**Question Shuffling Allowed :** No  
**Is Section Default? :** null

**Question Number : 6 Question Id : 48558433171 Question Type : MCQ Option Shuffling : No Is Question Mandatory : No Calculator : None Response Time : N.A Think Time : N.A Minimum Instruction Time : 0**

**Correct Marks : 5 Wrong Marks : 1**

**Question Key Details :**

Key	Value
Comprehension	Comp2

Organisms change over time. Some of these changes make no difference to the success or failure of the organism that inherit them; other changes do. Take a group of antelopes in which one individual has longer legs than its siblings. Those longer legs make the individual better at escaping from predators, hence giving it an advantage in the survival stakes. Its descendants inherit this feature and are better able to survive as a consequence. Those longer legs have thus become an 'adaptation' Their evolution means that this particular lineage of ante lopes has adapted to its conditions, thanks to its development of this features. Their evolution means that this particular lineage of ante lopes

Over the generations, the individual components of the genetic code within a species change, or mutate. So far as we know, mutations mny provide no evolutionary advantage at all. They may be disadvantageous, in which case they are weeded out via natural selection; or they may be advantageous, in which case they persist through the generations.

Choose the most appropriate meaning of the given word:

### MUTATION

1. undergo a change in the genetic code
2. transform into another organism
3. a rupture in the organism's growth
4. rapid change in the bone structure of the organism

#### Options :

- 485584132681. 1
- 485584132682. 2
- 485584132683. 3
- 485584132684. 4

**Question Number : 7 Question Id : 48558433172 Question Type : MCQ Option Shuffling : No Is Question Mandatory : No Calculator : None Response Time : N.A Think Time : N.A Minimum Instruction Time : 0**

**Correct Marks : 5 Wrong Marks : 1**

#### Question Key Details :

Key	Value
Comprehension	Comp2

Organisms change over time. Some of these changes make no difference to the success or failure of the organism that inherit them; other changes do. Take a group of antelopes in which one individual has longer legs than its siblings. Those longer legs make the individual better at escaping from predators, hence giving it an advantage in the survival stakes. Its descendants inherit this feature and are better able to survive as a consequence. Those longer legs have thus become an 'adaptation' Their evolution means that this particular lineage of ante lopes has adapted to its conditions, thanks to its development of this features. Their evolution means that this particular lineage of ante lopes

Over the generations, the individual components of the genetic code within a species change, or mutate. So far as we know, mutations mny provide no evolutionary advantage at all. They may be disadvantageous, in which case they are weeded out via natural selection; or they may be advantageous, in which case they persist through the generations.

Choose the most appropriate answer to the following question.  
How have antelopes adopted to get better at escaping from predators?

1. The long legs of the antelopes help them run faster and have become an adaptations
2. Their horns help them defeat predators
3. They have no advantageous mutations
4. They have a keen sense of smell

**Options :**

- 485584132685. 1
- 485584132686. 2
- 485584132687. 3
- 485584132688. 4

**Question Number : 8 Question Id : 48558433173 Question Type : MCQ Option Shuffling : No Is Question Mandatory : No Calculator : None Response Time : N.A Think Time : N.A Minimum Instruction Time : 0**

**Correct Marks : 5 Wrong Marks : 1**

**Question Key Details :**

Key	Value
Comprehension	Comp2

Organisms change over time. Some of these changes make no difference to the success or failure of the organism that inherit them; other changes do. Take a group of antelopes in which one individual has longer legs than its siblings. Those longer legs make the individual better at escaping from predators, hence giving it an advantage in the survival stakes. Its descendants inherit this feature and are better able to survive as a consequence. Those longer legs have thus become an 'adaptation' Their evolution means that this particular lineage of ante lopes has adapted to its conditions, thanks to its development of this features. Their evolution means that this particular lineage of ante lopes

Over the generations, the individual components of the genetic code within a species change, or mutate. So far as we know, mutations mny provide no evolutionary advantage at all. They may be disadvantageous, in which case they are weeded out via natural selection; or they may be advantageous, in which case they persist through the generations.

What happens to disadvantages mutations?

1. they are renewed through natural reduction
2. They persist through the generations
3. They remain an additional burden on the species
4. None of the above

**Options :**

- 485584132689. 1
- 485584132690. 2
- 485584132691. 3
- 485584132692. 4



**Question Number : 9 Question Id : 48558433174 Question Type : MCQ Option Shuffling : No Is Question Mandatory : No Calculator : None Response Time : N.A Think Time : N.A Minimum Instruction Time : 0**

**Correct Marks : 5 Wrong Marks : 1**

**Question Key Details :**

Key	Value
Comprehension	Comp2

Organisms change over time. Some of these changes make no difference to the success or failure of the organism that inherit them; other changes do. Take a group of antelopes in which one individual has longer legs than its siblings. Those longer legs make the individual better at escaping from predators, hence giving it an advantage in the survival stakes. Its descendants inherit this feature and are better able to survive as a consequence. Those longer legs have thus become an 'adaptation' Their evolution means that this particular lineage of ante lopes has adapted to its conditions, thanks to its development of this features. Their evolution means that this particular lineage of ante lopes

Over the generations, the individual components of the genetic code within a species change, or mutate. So far as we know, mutations mny provide no evolutionary advantage at all. They may be disadvantageous, in which case they are weeded out via natural selection; or they may be advantageous, in which case they persist through the generations.

Why do some mutations persist through generations?

1. They are harmful to the animal
2. They make no difference to the animal's survival
3. They are ornamental
4. They are advantageous to the animal

**Options :**

485584132693. 1

485584132694. 2

485584132695. 3

485584132696. 4

**Question Number : 10 Question Id : 48558433175 Question Type : MCQ Option Shuffling : No Is Question Mandatory : No Calculator : None Response Time : N.A Think Time : N.A Minimum Instruction Time : 0**

**Correct Marks : 5 Wrong Marks : 1**

**Question Key Details :**

Key	Value
Comprehension	Comp2

Organisms change over time. Some of these changes make no difference to the success or failure of the organism that inherit them; other changes do. Take a group of antelopes in which one individual has longer legs than its siblings. Those longer legs make the individual better at escaping from predators, hence giving it an advantage in the survival stakes. Its descendants inherit this feature and are better able to survive as a consequence. Those longer legs have thus become an 'adaptation' Their evolution means that this particular lineage of ante lopes has adapted to its conditions, thanks to its development of this features. Their evolution means that this particular lineage of ante lopes

Over the generations, the individual components of the genetic code within a species change, or mutate. So far as we know, mutations mny provide no evolutionary advantage at all. They may be disadvantageous, in which case they are weeded out via natural selection; or they may be advantageous, in which case they persist through the generations.

Choose an appropriate title for the passage from the following options:-

1. Adaptation and Mutation
2. Mutation: A Necessity
3. Genetic Code
4. Survival of the Antelope

**Options :**

- 485584132697. 1
- 485584132698. 2
- 485584132699. 3
- 485584132700. 4

**Sub-Section Number :** 3  
**Sub-Section Id :** 4855842404  
**Question Shuffling Allowed :** No  
**Is Section Default? :** null

**Question Number : 11 Question Id : 48558433176 Question Type : MCQ Option Shuffling : No Is Question Mandatory : No Calculator : None Response Time : N.A Think Time : N.A Minimum Instruction Time : 0**

**Correct Marks : 5 Wrong Marks : 1**

**Question Key Details :**

Key	Value
Comprehension	Comp3

Supposing you have to make a payment of Rs.100, you can do so in rupees-coins; but it would be cumbersome to pay in nickel or copper coins, because they are heavy to carry and also because it takes much time to count them. The government therefore permits you to make the payment in rupee-notes. What are these rupee notes really? They are kind of money, right enough, although they are made of paper instead of metal. You can use them in just the same way that you use ordinary money. The reason why they are made of paper and used is that they save the trouble of carrying metal coins about-of course, paper is lighter than metal-and they also save using silver and other metals when they are scarce.

What makes these mere pieces of of paper bear the value of the number of rupees that is printed upon them? Why should a piece of paper, with "100" printed on it be worth twenty times as much as a piece of paper with "five" printed on it-and also worth a hundred times as much as a silver rupee-coin? The reason is that Government guarantees that the piece of paper is worth the amount printed an it and promised to pay that amount to any body who wishes to exchange this paper for the rupee-coins. Also, if you think about it you can easily realize that crores and crores more of rupee-coins would have to be minted, if all paper-money were abolished.

Perhaps you may ask, "Then why not have paper money only?" Why use silver and Nickle and copper at all? The answer is-because money must, as we have already said, be something so useful that everyone wants. Also because the metals are the best form of money; and thirdly because it would be impossible to print just the right amount of paper money that would keep prices at their proper natural level. If any Government prints too much paper money, then prices go up at once. The supply of money is increased and therefore its value (in food, clothes, books, houses, land, tools and everything else) goes down.

You may think at first that it is queer to talk of having too much paper money and the money is so nice and useful that you cannot have too much of it. But if you think that, I an afraid you are forgetting that money is only useful for what it will buy; so it is no good at all having more money if there are no more things to buy with it. The more money there is , the higher will be the prices of everything. The same thing happens with rupee-coins as with paper money. But it is not likely to happen, for this reason: it is very easy to print a great deal of paper money, but not at all easy to increase the amount there is if it keeps very steady and changes very little. In fact that is one of the chief reasons why it was chosen to make coins of.

The Government allows payment to be made in \_\_\_\_\_

1. nickel
2. rupee coins
3. copper coins
4. rupee notes

**Options :**

- 485584132701. 1
- 485584132702. 2
- 485584132703. 3
- 485584132704. 4

**Question Number : 12 Question Id : 48558433177 Question Type : MCQ Option Shuffling : No Is Question Mandatory : No Calculator : None Response Time : N.A Think Time : N.A Minimum Instruction Time : 0**

**Correct Marks : 5 Wrong Marks : 1**

**Question Key Details :**

Key	Value
Comprehension	Comp3

Supposing you have to make a payment of Rs.100, you can do so in rupees-coins; but it would be cumbersome to pay in nickel or copper coins, because they are heavy to carry and also because it takes much time to count them. The government therefore permits you to make the payment in rupee-notes. What are these rupee notes really? They are kind of money, right enough, although they are made of paper instead of metal. You can use them in just the same way that you use ordinary money. The reason why they are made of paper and used is that they save the trouble of carrying metal coins about-of course, paper is lighter than metal-and they also save using silver and other metals when they are scarce.

What makes these mere pieces of of paper bear the value of the number of rupees that is printed upon them? Why should a piece of paper, with "100" printed on it be worth twenty times as much as a piece of paper with "five" printed on it-and also worth a hundred times as much as a silver rupee-coin? The reason is that Government guarantees that the piece of paper is worth the amount printed an it and promised to pay that amount to any body who wishes to exchange this paper for the rupee-coins. Also, if you think about it you can easily realize that crores and crores more of rupee-coins would have to be minted, if all paper-money were abolished.

Perhaps you may ask, "Then why not have paper money only?" Why use silver and Nickle and copper at all? The answer is-because money must, as we have already said, be something so useful that everyone wants. Also because the metals are the best form of money; and thirdly because it would be impossible to print just the right amount of paper money that would keep prices at their proper natural level. It any Government prints too much paper money, then prices go up at once. The supply of money is increased and therefore its value (in food, clothes, books, houses, land, tools and everything else) goes down.

You may think at first that it is queer to talk of having too much paper money and the money is so nice and useful that you cannot have too much of it. But if you think that, I an afraid you are forgetting that money is only useful for what it will buy; so it is no good at all having more money if there are no more things to buy with it. The more money there is , the higher will be the prices of everything. The same thing happens with rupee-coins as with paper money. But it is not likely to happen, for this reason: it is very easy to print a great deal of paper money, but not at all easy to increase the amount there is if it keeps very steady and changes very little. In fact that is one of the chief reasons why it was chosen to make coins of.

What are these rupee notes made of?

1. coins
2. nickel
3. paper
4. copper coins

**Options :**

485584132705. 1  
485584132706. 2  
485584132707. 3  
485584132708. 4

**Question Number : 13 Question Id : 48558433178 Question Type : MCQ Option Shuffling : No Is Question Mandatory : No Calculator : None Response Time : N.A Think Time : N.A Minimum Instruction Time : 0**

**Correct Marks : 5 Wrong Marks : 1**

**Question Key Details :**

Key	Value
Comprehension	Comp3

Supposing you have to make a payment of Rs.100, you can do so in rupees-coins; but it would be cumbersome to pay in nickel or copper coins, because they are heavy to carry and also because it takes much time to count them. The government therefore permits you to make the payment in rupee-notes. What are these rupee notes really? They are kind of money, right enough, although they are made of paper instead of metal. You can use them in just the same way that you use ordinary money. The reason why they are made of paper and used is that they save the trouble of carrying metal coins about-of course, paper is lighter than metal-and they also save using silver and other metals when they are scarce.

What makes these mere pieces of of paper bear the value of the number of rupees that is printed upon them? Why should a piece of paper, with "100" printed on it be worth twenty times as much as a piece of paper with "five" printed on it-and also worth a hundred times as much as a silver rupee-coin? The reason is that Government guarantees that the piece of paper is worth the amount printed an it and promised to pay that amount to any body who wishes to exchange this paper for the rupee-coins. Also, if you think about it you can easily realize that crores and crores more of rupee-coins would have to be minted, if all paper-money were abolished.

Perhaps you may ask, "Then why not have paper money only?" Why use silver and Nickle and copper at all? The answer is-because money must, as we have already said, be something so useful that everyone wants. Also because the metals are the best form of money; and thirdly because it would be impossible to print just the right amount of paper money that would keep prices at their proper natural level. If any Government prints too much paper money, then prices go up at once. The supply of money is increased and therefore its value (in food, clothes, books, houses, land, tools and everything else) goes down.

You may think at first that it is queer to talk of having too much paper money and the money is so nice and useful that you cannot have too much of it. But if you think that, I an afraid you are forgetting that money is only useful for what it will buy; so it is no good at all having more money if there are no more things to buy with it. The more money there is , the higher will be the prices of everything. The same thing happens with rupee-coins as with paper money. But it is not likely to happen, for this reason: it is very easy to print a great deal of paper money, but not at all easy to increase the amount there is if it keeps very steady and changes very little. In fact that is one of the chief reasons why it was chosen to make coins of.

\_\_\_\_\_ are the best form of money

1. paper-notes
2. metals
3. nickel coins
4. copper coins

**Options :**

- 485584132709. 1
- 485584132710. 2
- 485584132711. 3
- 485584132712. 4

**Question Number : 14 Question Id : 48558433179 Question Type : MCQ Option Shuffling : No Is Question Mandatory : No Calculator : None Response Time : N.A Think Time : N.A Minimum Instruction Time : 0**

**Correct Marks : 5 Wrong Marks : 1**

**Question Key Details :**

Key	Value
Comprehension	Comp3

Supposing you have to make a payment of Rs.100, you can do so in rupees-coins; but it would be cumbersome to pay in nickel or copper coins, because they are heavy to carry and also because it takes much time to count them. The government therefore permits you to make the payment in rupee-notes. What are these rupee notes really? They are kind of money, right enough, although they are made of paper instead of metal. You can use them in just the same way that you use ordinary money. The reason why they are made of paper and used is that they save the trouble of carrying metal coins about-of course, paper is lighter than metal-and they also save using silver and other metals when they are scarce.

What makes these mere pieces of of paper bear the value of the number of rupees that is printed upon them? Why should a piece of paper, with "100" printed on it be worth twenty times as much as a piece of paper with "five" printed on it-and also worth a hundred times as much as a silver rupee-coin? The reason is that Government guarantees that the piece of paper is worth the amount printed an it and promised to pay that amount to any body who wishes to exchange this paper for the rupee-coins. Also, if you think about it you can easily realize that crores and crores more of rupee-coins would have to be minted, if all paper-money were abolished.

Perhaps you may ask, "Then why not have paper money only?" Why use silver and Nickle and copper at all? The answer is-because money must, as we have already said, be something so useful that everyone wants. Also because the metals are the best form of money; and thirdly because it would be impossible to print just the right amount of paper money that would keep prices at their proper natural level. It any Government prints too much paper money, then prices go up at once. The supply of money is increased and therefore its value (in food, clothes, books, houses, land, tools and everything else) goes down.

You may think at first that it is queer to talk of having too much paper money and the money is so nice and useful that you cannot have too much of it. But if you think that, I an afraid you are forgetting that money is only useful for what it will buy; so it is no good at all having more money if there are no more things to buy with it. The more money there is , the higher will be the prices of everything. The same thing happens with rupee-coins as with paper money. But it is not likely to happen, for this reason: it is very easy to print a great deal of paper money, but not at all easy to increase the amount there is if it keeps very steady and changes very little. In fact that is one of the chief reasons why it was chosen to make coins of.

If the government prints too much paper money, then prices \_\_\_\_\_ at once

1. go up
2. go down
3. remain stable
4. don't change

**Options :**

- 485584132713. 1
- 485584132714. 2
- 485584132715. 3
- 485584132716. 4

**Question Number : 15 Question Id : 48558433180 Question Type : MCQ Option Shuffling : No Is Question Mandatory : No Calculator : None Response Time : N.A Think Time : N.A Minimum Instruction Time : 0**

**Correct Marks : 5 Wrong Marks : 1**

**Question Key Details :**

Key	Value
Comprehension	Comp3

Supposing you have to make a payment of Rs.100, you can do so in rupees-coins; but it would be cumbersome to pay in nickel or copper coins, because they are heavy to carry and also because it takes much time to count them. The government therefore permits you to make the payment in rupee-notes. What are these rupee notes really? They are kind of money, right enough, although they are made of paper instead of metal. You can use them in just the same way that you use ordinary money. The reason why they are made of paper and used is that they save the trouble of carrying metal coins about-of course, paper is lighter than metal-and they also save using silver and other metals when they are scarce.

What makes these mere pieces of of paper bear the value of the number of rupees that is printed upon them? Why should a piece of paper, with "100" printed on it be worth twenty times as much as a piece of paper with "five" printed on it-and also worth a hundred times as much as a silver rupee-coin? The reason is that Government guarantees that the piece of paper is worth the amount printed an it and promised to pay that amount to any body who wishes to exchange this paper for the rupee-coins. Also, if you think about it you can easily realize that crores and crores more of rupee-coins would have to be minted, if all paper-money were abolished.

Perhaps you may ask, "Then why not have paper money only?" Why use silver and Nickle and copper at all? The answer is-because money must, as we have already said, be something so useful that everyone wants. Also because the metals are the best form of money; and thirdly because it would be impossible to print just the right amount of paper money that would keep prices at their proper natural level. If any Government prints too much paper money, then prices go up at once. The supply of money is increased and therefore its value (in food, clothes, books, houses, land, tools and everything else) goes down.

You may think at first that it is queer to talk of having too much paper money and the money is so nice and useful that you cannot have too much of it. But if you think that, I an afraid you are forgetting that money is only useful for what it will buy; so it is no good at all having more money if there are no more things to buy with it. The more money there is , the higher will be the prices of everything. The same thing happens with rupee-coins as with paper money. But it is not likely to happen, for this reason: it is very easy to print a great deal of paper money, but not at all easy to increase the amount there is if it keeps very steady and changes very little. In fact that is one of the chief reasons why it was chosen to make coins of.

The more money there is \_\_\_\_\_ will be the prices of everything.

1. the lesser
2. the higher
3. the better
4. the worse

**Options :**

485584132717. 1  
485584132718. 2  
485584132719. 3  
485584132720. 4

**Sub-Section Number :** 4  
**Sub-Section Id :** 4855842405  
**Question Shuffling Allowed :** Yes  
**Is Section Default? :** null

**Question Number : 16 Question Id : 48558433181 Question Type : MCQ Option Shuffling : No Is Question Mandatory : No Calculator : None Response Time : N.A Think Time : N.A Minimum Instruction Time : 0 Correct Marks : 5 Wrong Marks : 1**

**Question Key Details :**

<b>Key</b>	<b>Value</b>
Comprehension	MCQ

Match List I with List II

Fill in the blanks with appropriate modals from in the sentences given in the list

LIST I		LIST II	
A.	_____ I go now?	I.	shall
B.	We _____ learn swimming	II.	can
C.	You _____ reach home before dark	III.	should
D.	We _____ discuss this matter tomorrow	IV.	ought to

Choose the correct answer from the options given below:

1. A-II, B-III, C-IV, D-I
2. A-I, B-II, C-III, D-IV
3. A-I, B-III, C-IV, D-I
4. A-III, B-IV, C-II, D-I

**Options :**

485584132721. 1  
 485584132722. 2  
 485584132723. 3  
 485584132724. 4

**Question Number : 17 Question Id : 48558433182 Question Type : MCQ Option Shuffling : No Is Question Mandatory : No Calculator : None Response Time : N.A Think Time : N.A Minimum Instruction Time : 0**

**Correct Marks : 5 Wrong Marks : 1**

**Question Key Details :**

<b>Key</b>	<b>Value</b>
Comprehension	MCQ

Fill in the most appropriate modal from the given options

Measles \_\_\_\_\_ be quite dangerous

1. could
2. can
3. should
4. would

**Options :**

485584132725. 1  
 485584132726. 2  
 485584132727. 3  
 485584132728. 4



**Question Number : 18 Question Id : 48558433183 Question Type : MCQ Option Shuffling : No Is Question Mandatory : No Calculator : None Response Time : N.A Think Time : N.A Minimum Instruction Time : 0**

**Correct Marks : 5 Wrong Marks : 1**

**Question Key Details :**

Key	Value
Comprehension	MCQ

Spot the error in the following sentence

1. It is often said that
2. some men are born great
3. some achieve greatness and
4. some had greatness threst on them

**Options :**

- 485584132729. 1
- 485584132730. 2
- 485584132731. 3
- 485584132732. 4

**Question Number : 19 Question Id : 48558433184 Question Type : MCQ Option Shuffling : No Is Question Mandatory : No Calculator : None Response Time : N.A Think Time : N.A Minimum Instruction Time : 0**

**Correct Marks : 5 Wrong Marks : 1**

**Question Key Details :**

Key	Value
Comprehension	MCQ

Change the voice of the following sentence from active to passive:

"I opened the window"

Choose the most appropriate option:

1. I was the one who opened option the window
2. The window was opened and I did it.
3. The window was by I.
4. The window was opened by me.

**Options :**

- 485584132733. 1
- 485584132734. 2
- 485584132735. 3
- 485584132736. 4

**Question Number : 20 Question Id : 48558433185 Question Type : MCQ Option Shuffling : No Is Question Mandatory : No Calculator : None Response Time : N.A Think Time : N.A Minimum Instruction Time : 0**

**Correct Marks : 5 Wrong Marks : 1**

**Question Key Details :**

Key	Value
Comprehension	MCQ

Change the voice of the following sentence from the passive to Active

"The essay was edited by the professor."

1. The professor found the essay and edited it.
2. The professor edited the essay.
3. The professor edited something which was the essay.
4. The professor was edited by the essay.

**Options :**

- 485584132737. 1
- 485584132738. 2
- 485584132739. 3
- 485584132740. 4

**Question Number : 21 Question Id : 48558433186 Question Type : MCQ Option Shuffling : No Is Question Mandatory : No Calculator : None Response Time : N.A Think Time : N.A Minimum Instruction Time : 0**

**Correct Marks : 5 Wrong Marks : 1**

**Question Key Details :**

Key	Value
Comprehension	MCQ

Choose the most appropriate meaning of the following foreign word: "nom de plume"

1. Plumage of a bird
2. Last resort
3. Pen-name
4. Method of operating

**Options :**

- 485584132741. 1
- 485584132742. 2
- 485584132743. 3
- 485584132744. 4

**Question Number : 22 Question Id : 48558433187 Question Type : MCQ Option Shuffling : No Is Question Mandatory : No Calculator : None Response Time : N.A Think Time : N.A Minimum Instruction Time : 0**

**Correct Marks : 5 Wrong Marks : 1**

**Question Key Details :**

Key	Value
Comprehension	MCQ

Match the words in List I with their meanings in List II

LIST I		LIST II	
A.	Mandate	I.	reward
B.	recompense	II.	comfort in time of distress
C.	Solace	III.	an official order to do something
D.	Tatters	IV.	torn pieces of cloth or paper

Choose the correct answer from the options given below:

1. A-I, B-II, C-IV, D-III
2. A-II, B-III, C-I, D-IV
3. A-III, B-I, C-II, D-IV
4. A-IV, B-III, C-II, D-I

**Options :**

485584132745. 1  
485584132746. 2  
485584132747. 3  
485584132748. 4

**Question Number : 23 Question Id : 48558433188 Question Type : MCQ Option Shuffling : No Is Question Mandatory : No Calculator : None Response Time : N.A Think Time : N.A Minimum Instruction Time : 0**

**Correct Marks : 5 Wrong Marks : 1**

**Question Key Details :**

Key	Value
Comprehension	MCQ

Choose the most appropriate meaning of the following foreign word: "Papier mache"

1. Paper mixed with glue
2. Paper mixed with metal
3. Paper mixed with soil
4. Paper mixed with charcoal

**Options :**

485584132749. 1  
485584132750. 2  
485584132751. 3  
485584132752. 4

**Question Number : 24 Question Id : 48558433189 Question Type : MCQ Option Shuffling : No Is Question Mandatory : No Calculator : None Response Time : N.A Think Time : N.A Minimum Instruction Time : 0**

**Correct Marks : 5 Wrong Marks : 1**

**Question Key Details :**

Key	Value
Comprehension	MCQ

Change the following sentence from Direct speech to Indirect Speech:  
The coach promised, " If you will come before school tomorrow, I will teach it,"

Choose appropriate option.

1. The coach promised to meet me after school and teach it.
2. The coach promised that if came before school the next day, he would teach it to me.
3. The coach promised to come before school and teach it to me.
4. The coach promised that I will be thought before school if I came

**Options :**

485584132753. 1  
485584132754. 2  
485584132755. 3  
485584132756. 4

**Question Number : 25 Question Id : 48558433190 Question Type : MCQ Option Shuffling : No Is Question Mandatory : No Calculator : None Response Time : N.A Think Time : N.A Minimum Instruction Time : 0**

**Correct Marks : 5 Wrong Marks : 1**

**Question Key Details :**

Key	Value
Comprehension	MCQ

Change the following sentence from Indirect speech to Direct Speech.

She said, "Bravo! You did better than last time"

Choose the most appropriate option:

1. She applauded him, saying that he had done better than last time.
2. She said bravo to him and pointed out that he had done better than last time.
3. She was happy that he had done better than last time.
4. She could not believe that he had done better than last time and said bravo to him.

**Options :**

485584132757. 1  
485584132758. 2  
485584132759. 3  
485584132760. 4

**Question Number : 26 Question Id : 48558433191 Question Type : MCQ Option Shuffling : No Is Question Mandatory : No Calculator : None Response Time : N.A Think Time : N.A Minimum Instruction Time : 0**

**Correct Marks : 5 Wrong Marks : 1**

**Question Key Details :**

Key	Value
Comprehension	MCQ

Choose the most appropriate synonym for the following word: "Alarm"

1. Foresee
2. Sleep
3. Awake
4. Shock

**Options :**

485584132761. 1  
485584132762. 2  
485584132763. 3  
485584132764. 4

**Question Number : 27 Question Id : 48558433192 Question Type : MCQ Option Shuffling : No Is Question Mandatory : No Calculator : None Response Time : N.A Think Time : N.A Minimum Instruction Time : 0**

**Correct Marks : 5 Wrong Marks : 1**

**Question Key Details :**

Key	Value
Comprehension	MCQ

Choose the best option to convert the given exclamatory sentence is to Assertive sentence:-

How stupid of me to forget your name!

1. It is stupid of me to forget your name
2. I wonder how can I be stupid to forget your name
3. I can never be stupid to forget your name
4. Forgetting your name is my stupid behaviour

**Options :**

485584132765. 1  
485584132766. 2  
485584132767. 3  
485584132768. 4

**Question Number : 28 Question Id : 48558433193 Question Type : MCQ Option Shuffling : No Is Question Mandatory : No Calculator : None Response Time : N.A Think Time : N.A Minimum Instruction Time : 0**

**Correct Marks : 5 Wrong Marks : 1**

**Question Key Details :**

Key	Value
Comprehension	MCQ

Choose the best option to convert the given assertive sentence in to exclamatory sentence:-

I wish I knew more people here

1. If only I knew more people here!
2. Oh! I knew more people here.
3. What a pity to have known more people here!
4. Alas! I could have known more people here.

**Options :**

- 485584132769. 1
- 485584132770. 2
- 485584132771. 3
- 485584132772. 4

**Question Number : 29 Question Id : 48558433194 Question Type : MCQ Option Shuffling : No Is Question Mandatory : No Calculator : None Response Time : N.A Think Time : N.A Minimum Instruction Time : 0**

**Correct Marks : 5 Wrong Marks : 1**

**Question Key Details :**

Key	Value
Comprehension	MCQ

Match List I with List II

Fill in appropriate modals from list II in The sentences in List I.

LIST I		LIST II	
A.	No one _____ question the ways of God.	I.	Could
B.	How _____ you should at your parents?	II.	Would
C.	_____ you like to have breakfast with me?	III.	can
D.	We _____ respect our elders	IV.	ought to

Choose the correct answer from the options given below:

1. A-I, B-II, C-III, D-IV
2. A-II, B-III, C-I, D-IV
3. A-III, B-I, C-II, D-IV
4. A-IV, B-III, C-I, D-II

**Options :**

- 485584132773. 1
- 485584132774. 2
- 485584132775. 3
- 485584132776. 4

**Question Number : 30 Question Id : 48558433195 Question Type : MCQ Option Shuffling : No Is Question Mandatory : No Calculator : None Response Time : N.A Think Time : N.A Minimum Instruction Time : 0**

**Correct Marks : 5 Wrong Marks : 1**

**Question Key Details :**

Key	Value
Comprehension	MCQ

Fill in correct modals in the given sentence from the given options:-

I wish I \_\_\_\_\_ help you, but I have no money.

1. may
2. could
3. might
4. can

**Options :**

- 485584132777. 1
- 485584132778. 2
- 485584132779. 3
- 485584132780. 4

**Question Number : 31 Question Id : 48558433196 Question Type : MCQ Option Shuffling : No Is Question Mandatory : No Calculator : None Response Time : N.A Think Time : N.A Minimum Instruction Time : 0**

**Correct Marks : 5 Wrong Marks : 1**

**Question Key Details :**

Key	Value
Comprehension	MCQ

Which of the following is an appropriate subscription for a formal letter?

Choose from the options given below:

1. Yours sincerely
2. Yours lovingly
3. Yours forever
4. Your dear friend

**Options :**

- 485584132781. 1
- 485584132782. 2
- 485584132783. 3
- 485584132784. 4

**Question Number : 32 Question Id : 48558433197 Question Type : MCQ Option Shuffling : No Is Question Mandatory : No Calculator : None Response Time : N.A Think Time : N.A Minimum Instruction Time : 0**

**Correct Marks : 5 Wrong Marks : 1**

**Question Key Details :**

Key	Value
Comprehension	MCQ

Which of the following elements are Not found in informal letters?

Choose from the options given below:

1. Signature
2. Date
3. Salutation or Courteous greeting
4. Subject

**Options :**

- 485584132785. 1
- 485584132786. 2
- 485584132787. 3
- 485584132788. 4

**Question Number : 33 Question Id : 48558433198 Question Type : MCQ Option Shuffling : No Is Question Mandatory : No Calculator : None Response Time : N.A Think Time : N.A Minimum Instruction Time : 0**

**Correct Marks : 5 Wrong Marks : 1**

**Question Key Details :**

Key	Value
Comprehension	MCQ

Which of the following pair of words are not homonyms:

1. cite, site
2. pallet, palate
3. burn, burden
4. hear, here

**Options :**

- 485584132789. 1
- 485584132790. 2
- 485584132791. 3
- 485584132792. 4

**Question Number : 34 Question Id : 48558433199 Question Type : MCQ Option Shuffling : No Is Question Mandatory : No Calculator : None Response Time : N.A Think Time : N.A Minimum Instruction Time : 0**

**Correct Marks : 5 Wrong Marks : 1**

**Question Key Details :**

Key	Value
Comprehension	MCQ



Rearrange the following jumbled phrases into a coherent sentence

- A. A given trait whenever they are present
- B. Among heterogenous organisms,
- C. Meaning that they result in the expression of
- D. Some adults are dominant

- 1. ACDB
- 2. BDCA
- 3. DACB
- 4. CDAB

**Options :**

- 485584132793. 1
- 485584132794. 2
- 485584132795. 3
- 485584132796. 4

**Question Number : 35 Question Id : 48558433200 Question Type : MCQ Option Shuffling : No Is Question Mandatory : No Calculator : None Response Time : N.A Think Time : N.A Minimum Instruction Time : 0**

**Correct Marks : 5 Wrong Marks : 1**

**Question Key Details :**

Key	Value
Comprehension	MCQ

Rearrange the following jumbled phrases into a coherent sentence

- A. as Annu is senior than Susan
- B. though Susan had worked there before Annu
- C. Annu received the promotion instead of Susan
- D. in age

- 1. ABCD
- 2. DBAC
- 3. CADB
- 4. BACD

**Options :**

- 485584132797. 1
- 485584132798. 2
- 485584132799. 3
- 485584132800. 4

**Question Number : 36 Question Id : 48558433201 Question Type : MCQ Option Shuffling : No Is Question Mandatory : No Calculator : None Response Time : N.A Think Time : N.A Minimum Instruction Time : 0**

**Correct Marks : 5 Wrong Marks : 1**

**Question Key Details :**

Key	Value
Comprehension	MCQ

The given sentence is divided into three parts. Scan it carefully for errors and choose the most appropriate options

A) I found less | B) books in the| C) library than that

1. A only
2. B and C
3. C only
4. No error

**Options :**

- 485584132801. 1
- 485584132802. 2
- 485584132803. 3
- 485584132804. 4

**Question Number : 37 Question Id : 48558433202 Question Type : MCQ Option Shuffling : No Is Question Mandatory : No Calculator : None Response Time : N.A Think Time : N.A Minimum Instruction Time : 0**

**Correct Marks : 5 Wrong Marks : 1**

**Question Key Details :**

Key	Value
Comprehension	MCQ

The given sentence is divided into tissue parts. scan it carefully for errors and choose the most appropriate options

- A) Few persons
- B) are free
- C) from worries

1. A only
2. A and C
3. C only
4. No errors

**Options :**

- 485584132805. 1
- 485584132806. 2
- 485584132807. 3
- 485584132808. 4

**Question Number : 38 Question Id : 48558433203 Question Type : MCQ Option Shuffling : No Is Question Mandatory : No Calculator : None Response Time : N.A Think Time : N.A Minimum Instruction Time : 0**

**Correct Marks : 5 Wrong Marks : 1**

**Question Key Details :**

Key	Value
Comprehension	MCQ

Identify the option that demonstrates the most appropriate usage of an adjective clause.

1. She is senior and most intelligent than her friend.
2. Meera adopted a Two-years- old girl.
3. This tree is to big as the other tree.
4. She took a six-week course.

**Options :**

- 485584132809. 1
- 485584132810. 2
- 485584132811. 3
- 485584132812. 4

**Question Number : 39 Question Id : 48558433204 Question Type : MCQ Option Shuffling : No Is Question Mandatory : No Calculator : None Response Time : N.A Think Time : N.A Minimum Instruction Time : 0**

**Correct Marks : 5 Wrong Marks : 1**

**Question Key Details :**

Key	Value
Comprehension	MCQ

Choose the options which demonstrates an appropriate usage of articles.

1. She would make a better statesman than philosopher
2. She would make better statesman than philosopher
3. She would make a better statesman than a philosopher
4. She would makes better statesman than a philosopher

**Options :**

- 485584132813. 1
- 485584132814. 2
- 485584132815. 3
- 485584132816. 4

**Question Number : 40 Question Id : 48558433205 Question Type : MCQ Option Shuffling : No Is Question Mandatory : No Calculator : None Response Time : N.A Think Time : N.A Minimum Instruction Time : 0**

**Correct Marks : 5 Wrong Marks : 1**

**Question Key Details :**

Key	Value
Comprehension	MCQ

Which of the following sentences demonstrate appropriate use(s) of asterisks

1. The third and fourth chapter will be tested in exam
2. The third and fourth chapters will be tested in the exam
3. Third and fourth chapter will be tested in the exam
4. The third and fourth chapters will be tested in the exam

**Options :**

- 485584132817. 1
- 485584132818. 2
- 485584132819. 3
- 485584132820. 4

**Question Number : 41 Question Id : 48558433206 Question Type : MCQ Option Shuffling : No Is Question Mandatory : No Calculator : None Response Time : N.A Think Time : N.A Minimum Instruction Time : 0**

**Correct Marks : 5 Wrong Marks : 1**

**Question Key Details :**

Key	Value
Comprehension	MCQ

Fill in the blanks with the most appropriate adverbs.

Does she sing well? \_\_\_\_\_ she does

1. Yes
2. of course
3. I think
4. Certainly

**Options :**

- 485584132821. 1
- 485584132822. 2
- 485584132823. 3
- 485584132824. 4

**Question Number : 42 Question Id : 48558433207 Question Type : MCQ Option Shuffling : No Is Question Mandatory : No Calculator : None Response Time : N.A Think Time : N.A Minimum Instruction Time : 0**

**Correct Marks : 5 Wrong Marks : 1**

**Question Key Details :**

Key	Value
Comprehension	MCQ

Read the following sentence care. Some part of the sentence may have an error. Choose the most appropriate options.

Mumbai (A) | is New York (B) | of India (c)

1. A
2. B
3. C
4. No error

**Options :**

485584132825. 1  
485584132826. 2  
485584132827. 3  
485584132828. 4

**Question Number : 43 Question Id : 48558433208 Question Type : MCQ Option Shuffling : No Is Question Mandatory : No Calculator : None Response Time : N.A Think Time : N.A Minimum Instruction Time : 0**

**Correct Marks : 5 Wrong Marks : 1**

**Question Key Details :**

Key	Value
Comprehension	MCQ

Match List I with List II

LIST I		LIST II	
A.	Wherefore	I.	adverb of reason
B.	seriously	II.	adverb of degree
C.	probably	III.	interrogative adverb
D.	consequently	IV.	adverb of affirmation

Choose the correct answer from the options given below:

1. A-IV, B-III, C-II, D-I
2. A-III, B-I, C-IV, D-II
3. A-III, B-II, C-IV, D-I
4. A-I, B-II, C-IV, D-IV

**Options :**

485584132829. 1  
485584132830. 2  
485584132831. 3  
485584132832. 4

**Question Number : 44 Question Id : 48558433209 Question Type : MCQ Option Shuffling : No Is Question Mandatory : No Calculator : None Response Time : N.A Think Time : N.A Minimum Instruction Time : 0**

**Correct Marks : 5 Wrong Marks : 1**

**Question Key Details :**

Key	Value
Comprehension	MCQ

Rearrange the following sentences to form a coherent paragraph

- A. Because, if the manager's subordinates are inefficient and ineffective and are not helped to increase their efficiency and effectiveness, the task may not be achieved.
- B. This may be just as true as the responsibility for achieving prescribed tasks.
- C. If it is achieved at too great a cost, or at the risk of other effects many of which are less obvious.
- D. It is often said that one of the prime responsibilities of a manager is the training and development of staff

- 1. CBAD
- 2. DBAC
- 3. DCAB
- 4. CDAB

**Options :**

- 485584132833. 1
- 485584132834. 2
- 485584132835. 3
- 485584132836. 4

**Question Number : 45 Question Id : 48558433210 Question Type : MCQ Option Shuffling : No Is Question Mandatory : No Calculator : None Response Time : N.A Think Time : N.A Minimum Instruction Time : 0**

**Correct Marks : 5 Wrong Marks : 1**

**Question Key Details :**

Key	Value
Comprehension	MCQ

Choose the most appropriate antonym of the given word: UPROARIOUS

- 1. calm
- 2. Tumultuous
- 3. bleating
- 4. upright

**Options :**

- 485584132837. 1
- 485584132838. 2
- 485584132839. 3
- 485584132840. 4

**Question Number : 46 Question Id : 48558433211 Question Type : MCQ Option Shuffling : No Is Question Mandatory : No Calculator : None Response Time : N.A Think Time : N.A Minimum Instruction Time : 0**

**Correct Marks : 5 Wrong Marks : 1**

**Question Key Details :**

Key	Value
-----	-------

Match List I with List II Antonyms

LIST I		LIST II	
A.	luminous	I.	initially
B.	eventually	II.	supercilious
C.	subservient	III.	unholy
D.	sacrosant	IV.	dark

Choose the correct answer from the options given below:

1. A-IV, B-III, C-II, D-I
2. A-III, B-II, C-I, D-IV
3. A-IV, B-I, C-II, D-III
4. A-I, B-III, C-II, D-IV

**Options :**

485584132841. 1  
 485584132842. 2  
 485584132843. 3  
 485584132844. 4

**Question Number : 47 Question Id : 48558433212 Question Type : MCQ Option Shuffling : No Is Question Mandatory : No Calculator : None Response Time : N.A Think Time : N.A Minimum Instruction Time : 0**

**Correct Marks : 5 Wrong Marks : 1**

**Question Key Details :**

Key	Value
Comprehension	MCQ

Fill in the blanks with the most appropriate prepositions

I prefer tea \_\_\_\_\_ coffee

1. with
2. to
3. over
4. of

**Options :**

485584132845. 1  
 485584132846. 2  
 485584132847. 3  
 485584132848. 4

**Question Number : 48 Question Id : 48558433213 Question Type : MCQ Option Shuffling : No Is Question Mandatory : No Calculator : None Response Time : N.A Think Time : N.A Minimum Instruction Time : 0**

**Correct Marks : 5 Wrong Marks : 1**

**Question Key Details :**

Key	Value
Comprehension	MCQ

The soldiers were \_\_\_\_\_ war

1. at
2. in
3. on
4. of

**Options :**

485584132849. 1  
 485584132850. 2  
 485584132851. 3  
 485584132852. 4

**Question Number : 49 Question Id : 48558433214 Question Type : MCQ Option Shuffling : No Is Question Mandatory : No Calculator : None Response Time : N.A Think Time : N.A Minimum Instruction Time : 0**

**Correct Marks : 5 Wrong Marks : 1**

**Question Key Details :**

Key	Value
Comprehension	MCQ

Match the phrasal words with most appropriate meaning

LIST I		LIST II	
A.	draw up	I.	make someone sad or depressed
B.	drag out	II.	prepare and write something
C.	drag down	III.	use a resource to do something
D.	draw on	IV.	make something longer than necessary

Choose the correct answer from the options given below:

1. A-II, B-IV, C-I, D-III
2. A-I, B-II, C-III, D-IV
3. A-II, B-IV, C-III, D-I
4. A-I, B-II, C-IV, D-III

**Options :**

485584132853. 1  
 485584132854. 2  
 485584132855. 3  
 485584132856. 4

**Question Number : 50 Question Id : 48558433215 Question Type : MCQ Option Shuffling : No Is Question Mandatory : No Calculator : None Response Time : N.A Think Time : N.A Minimum Instruction Time : 0**

**Correct Marks : 5 Wrong Marks : 1**



**Question Key Details :**

Key	Value
Comprehension	MCQ

Match the idioms with most appropriate meaning

LIST I		LIST II	
A.	fish out of water	I.	good luck
B.	break a leg	II.	someone about whom very little is known
C.	leave in the lurch	III.	to be put in an unfamiliar situation
D.	dark horse	IV.	abandon someone in a difficult situation

Choose the correct answer from the options given below:

1. A-III, B-IV, C-II, D-I
2. A-III, B-I, C-IV, D-II
3. A-I, B-III, C-IV, D-II
4. A-II, B-I, C-I, D-IV

**Options :**

485584132857. 1  
 485584132858. 2  
 485584132859. 3  
 485584132860. 4

**Hindi**

<b>Group Number :</b>	2
<b>Group Id :</b>	485584740
<b>Group Maximum Duration :</b>	45
<b>Group Minimum Duration :</b>	45
<b>Show Attended Group? :</b>	No
<b>Edit Attended Group? :</b>	No
<b>Break time :</b>	0
<b>Group Marks :</b>	200
<b>Is this Group for Examiner? :</b>	No
<b>Examiner permission :</b>	Cant View
<b>Show Progress Bar? :</b>	No

**Hindi**

<b>Section Id :</b>	485584854
<b>Section Number :</b>	1
<b>Section type :</b>	Online
<b>Mandatory or Optional :</b>	Mandatory
<b>Number of Questions :</b>	50
<b>Number of Questions to be attempted :</b>	40
<b>Section Marks :</b>	200
<b>Enable Mark as Answered Mark for Review and Clear Response :</b>	Yes

<b>Maximum Instruction Time :</b>	0
<b>Sub-Section Number :</b>	1
<b>Sub-Section Id :</b>	4855842406
<b>Question Shuffling Allowed :</b>	No
<b>Is Section Default? :</b>	null
<b>Sub-Section Number :</b>	2
<b>Sub-Section Id :</b>	4855842407
<b>Question Shuffling Allowed :</b>	No
<b>Is Section Default? :</b>	null
<b>Sub-Section Number :</b>	3
<b>Sub-Section Id :</b>	4855842408
<b>Question Shuffling Allowed :</b>	No
<b>Is Section Default? :</b>	null
<b>Sub-Section Number :</b>	4
<b>Sub-Section Id :</b>	4855842409
<b>Question Shuffling Allowed :</b>	Yes
<b>Is Section Default? :</b>	null

### Assamese

<b>Group Number :</b>	3
<b>Group Id :</b>	485584741
<b>Group Maximum Duration :</b>	45
<b>Group Minimum Duration :</b>	45
<b>Show Attended Group? :</b>	No
<b>Edit Attended Group? :</b>	No
<b>Break time :</b>	0
<b>Group Marks :</b>	200
<b>Is this Group for Examiner? :</b>	No
<b>Examiner permission :</b>	Cant View
<b>Show Progress Bar? :</b>	No

### Assamese

<b>Section Id :</b>	485584855
<b>Section Number :</b>	1
<b>Section type :</b>	Online
<b>Mandatory or Optional :</b>	Mandatory
<b>Number of Questions :</b>	50
<b>Number of Questions to be attempted :</b>	40
<b>Section Marks :</b>	200
<b>Enable Mark as Answered Mark for Review and Clear Response :</b>	Yes
<b>Maximum Instruction Time :</b>	0
<b>Sub-Section Number :</b>	1
<b>Sub-Section Id :</b>	4855842410
<b>Question Shuffling Allowed :</b>	No
<b>Is Section Default? :</b>	null
<b>Sub-Section Number :</b>	2
<b>Sub-Section Id :</b>	4855842411
<b>Question Shuffling Allowed :</b>	No
<b>Is Section Default? :</b>	null
<b>Sub-Section Number :</b>	3

<b>Sub-Section Id :</b>	4855842412
<b>Question Shuffling Allowed :</b>	No
<b>Is Section Default? :</b>	null
<b>Sub-Section Number :</b>	4
<b>Sub-Section Id :</b>	4855842413
<b>Question Shuffling Allowed :</b>	Yes
<b>Is Section Default? :</b>	null

## Kannada

<b>Group Number :</b>	4
<b>Group Id :</b>	485584742
<b>Group Maximum Duration :</b>	45
<b>Group Minimum Duration :</b>	45
<b>Show Attended Group? :</b>	No
<b>Edit Attended Group? :</b>	No
<b>Break time :</b>	0
<b>Group Marks :</b>	200
<b>Is this Group for Examiner? :</b>	No
<b>Examiner permission :</b>	Cant View
<b>Show Progress Bar? :</b>	No

## Kannada

<b>Section Id :</b>	485584856
<b>Section Number :</b>	1
<b>Section type :</b>	Online
<b>Mandatory or Optional :</b>	Mandatory
<b>Number of Questions :</b>	50
<b>Number of Questions to be attempted :</b>	40
<b>Section Marks :</b>	200
<b>Enable Mark as Answered Mark for Review and Clear Response :</b>	Yes
<b>Maximum Instruction Time :</b>	0
<b>Sub-Section Number :</b>	1
<b>Sub-Section Id :</b>	4855842414
<b>Question Shuffling Allowed :</b>	No
<b>Is Section Default? :</b>	null
<b>Sub-Section Number :</b>	2
<b>Sub-Section Id :</b>	4855842415
<b>Question Shuffling Allowed :</b>	No
<b>Is Section Default? :</b>	null
<b>Sub-Section Number :</b>	3
<b>Sub-Section Id :</b>	4855842416
<b>Question Shuffling Allowed :</b>	No
<b>Is Section Default? :</b>	null
<b>Sub-Section Number :</b>	4
<b>Sub-Section Id :</b>	4855842417
<b>Question Shuffling Allowed :</b>	Yes
<b>Is Section Default? :</b>	null

## Japanese

Group Number :	5
Group Id :	485584743
Group Maximum Duration :	45
Group Minimum Duration :	45
Show Attended Group? :	No
Edit Attended Group? :	No
Break time :	0
Group Marks :	200
Is this Group for Examiner? :	No
Examiner permission :	Cant View
Show Progress Bar? :	No

## Japanese

Section Id :	485584857
Section Number :	1
Section type :	Online
Mandatory or Optional :	Mandatory
Number of Questions :	50
Number of Questions to be attempted :	40
Section Marks :	200
Enable Mark as Answered Mark for Review and Clear Response :	Yes
Maximum Instruction Time :	0
Sub-Section Number :	1
Sub-Section Id :	4855842418
Question Shuffling Allowed :	No
Is Section Default? :	null
Sub-Section Number :	2
Sub-Section Id :	4855842419
Question Shuffling Allowed :	No
Is Section Default? :	null
Sub-Section Number :	3
Sub-Section Id :	4855842420
Question Shuffling Allowed :	No
Is Section Default? :	null
Sub-Section Number :	4
Sub-Section Id :	4855842421
Question Shuffling Allowed :	Yes
Is Section Default? :	null

## Entrepreneurship

Group Number :	6
Group Id :	485584744
Group Maximum Duration :	45
Group Minimum Duration :	45
Show Attended Group? :	No
Edit Attended Group? :	No
Break time :	0
Group Marks :	200

Is this Group for Examiner? : No  
Examiner permission : Cant View  
Show Progress Bar? : No

## Entrepreneurship

Section Id : 485584858  
Section Number : 1  
Section type : Online  
Mandatory or Optional : Mandatory  
Number of Questions : 50  
Number of Questions to be attempted : 40  
Section Marks : 200  
Enable Mark as Answered Mark for Review and Clear Response : Yes  
Maximum Instruction Time : 0  
Sub-Section Number : 1  
Sub-Section Id : 4855842422  
Question Shuffling Allowed : Yes  
Is Section Default? : null

Question Number : 51 Question Id : 48558433466 Question Type : MCQ Option Shuffling : No Is Question Mandatory :  
No Calculator : None Response Time : N.A Think Time : N.A Minimum Instruction Time : 0  
Correct Marks : 5 Wrong Marks : 1

Question Key Details :

Key	Value
Comprehension	MCQ

Creativity process occurs in the following sequence:

- A. Illumination
- B. Preparation
- C. Verification
- D. Idea Germination
- E. Incubation

Choose the correct answer from the options given below:

- 1. B, A, D, C, E
- 2. D, B, E, A, C
- 3. B, D, A, E, C
- 4. A, C, D, B, E

Options :

- 485584133861. 1
- 485584133862. 2
- 485584133863. 3
- 485584133864. 4

Question Number : 51 Question Id : 48558433466 Question Type : MCQ Option Shuffling : No Is Question Mandatory :  
No Calculator : None Response Time : N.A Think Time : N.A Minimum Instruction Time : 0  
Correct Marks : 5 Wrong Marks : 1

**Question Key Details :**

Key	Value
Comprehension	MCQ

ਸੰਰਚਨਾ ਦੀ ਕਿਰਿਆ ਨੂੰ ਲੜੀ ਬੱਧ ਤਰੀਕੇ ਨਾਲ ਲਿਖੋ?

- A. ਪ੍ਰਕਾਸ਼
- B. ਤਿਆਰੀ
- C. ਤਸਦੀਕ
- D. ਵਿਚਾਰ ਦੀ ਉਤਪੱਤੀ
- E. ਪਛੁੱਲਤ

ਹੇਠਾਂ ਦਿੱਤੇ ਵਿਕਲਪਾਂ ਵਿੱਚੋਂ ਸਹੀ ਉੱਤਰ ਚੁਣੋ:

- 1. B, A, D, C, E
- 2. D, B, E, A, C
- 3. B, D, A, E, C
- 4. A, C, D, B, E

**Options :**

- 485584133861. 1
- 485584133862. 2
- 485584133863. 3
- 485584133864. 4

**Question Number : 52 Question Id : 48558433467 Question Type : MCQ Option Shuffling : No Is Question Mandatory : No Calculator : None Response Time : N.A Think Time : N.A Minimum Instruction Time : 0**

**Correct Marks : 5 Wrong Marks : 1**

**Question Key Details :**

Key	Value
Comprehension	MCQ

All ideas may not become a sound business opportunity. Therefore we need to assess the idea and opportunity by following a correct sequence. Rearrange the steps in the correct order.

- A. Level of operation
- B. Product identification
- C. Cost of production
- D. Competition
- E. Application and use

Choose the correct answer from the options given below:

- 1. B, A, D, C, E
- 2. B, E, A, C, D
- 3. C, A, B, E, D
- 4. B, E, A, D, C

**Options :**

485584133865. 1  
485584133866. 2  
485584133867. 3  
485584133868. 4

**Question Number : 52 Question Id : 48558433467 Question Type : MCQ Option Shuffling : No Is Question Mandatory : No Calculator : None Response Time : N.A Think Time : N.A Minimum Instruction Time : 0**

**Correct Marks : 5 Wrong Marks : 1**

**Question Key Details :**

Key	Value
Comprehension	MCQ

ਹਰ ਵਿਚਾਰ ਇੱਕ ਚੰਗਾ ਵਪਾਰ ਨਹੀਂ ਬਣ ਸਕਦਾ, ਇਸ ਕਰਕੇ ਸਾਨੂੰ ਵਿਚਾਰ ਦੇ ਨਾਲ ਨਾਲ ਅਵਸਰ ਨੂੰ ਜਾਂਚਣਾ ਚਾਹੀਦਾ ਹੈ, ਸਹੀ ਲੜੀ ਚੁਣੋ?

- A. ਕਾਰਵਾਈ ਦਾ ਪੱਧਰ
- B. ਵਸਤੂ ਦੀ ਪਛਾਣ
- C. ਉਤਪਾਦਨ ਦੀ ਲਾਗਤ
- D. ਪ੍ਰਤੀਯੋਗਤਾ
- E. ਲਾਗੂ ਕਰਨਾ ਅਤੇ ਇਸਤੇਮਾਲ ਕਰਨਾ

ਹੇਠਾਂ ਦਿੱਤੇ ਵਿਕਲਪਾਂ ਵਿੱਚੋਂ ਸਹੀ ਉੱਤਰ ਚੁਣੋ:

- 1. B, A, D, C, E
- 2. B, E, A, C, D
- 3. C, A, B, E, D
- 4. B, E, A, D, C

**Options :**

485584133865. 1  
485584133866. 2  
485584133867. 3  
485584133868. 4

**Question Number : 53 Question Id : 48558433468 Question Type : MCQ Option Shuffling : No Is Question Mandatory : No Calculator : None Response Time : N.A Think Time : N.A Minimum Instruction Time : 0**

**Correct Marks : 5 Wrong Marks : 1**

**Question Key Details :**

Key	Value
Comprehension	MCQ

\_\_\_\_\_ are 'Convenient frames of reference for streamlining the process of generation of ideas'.

- 1. Reference fields
- 2. Idea generation
- 3. Idea fields
- 4. Product generation

**Options :**

485584133869. 1  
485584133870. 2  
485584133871. 3  
485584133872. 4

**Question Number : 53 Question Id : 48558433468 Question Type : MCQ Option Shuffling : No Is Question Mandatory : No Calculator : None Response Time : N.A Think Time : N.A Minimum Instruction Time : 0**

**Correct Marks : 5 Wrong Marks : 1**

**Question Key Details :**

Key	Value
Comprehension	MCQ

\_\_\_\_\_ ਵਿਚਾਰਾਂ ਦੇ ਉਤਪਾਦਨ ਦੀ ਪ੍ਰਕਿਰਿਆ ਨੂੰ ਸੁਚਾਰੂ ਬਣਾਉਣ ਲਈ ਸੰਦਰਭਾਂ ਦੇ ਸੁਵਿਧਾ ਜਨਕ ਫਰੇਮ ਹਨ?

1. ਹਵਾਲਾ ਖੇਤਰ
2. ਵਿਚਾਰਾਂ ਦੀ ਉਤਪੱਤੀ
3. ਵਿਚਾਰਾਂ ਦੇ ਖੇਤਰ
4. ਵਸਤੂ ਉਤਪਾਦਨ

**Options :**

485584133869. 1  
485584133870. 2  
485584133871. 3  
485584133872. 4

**Question Number : 54 Question Id : 48558433469 Question Type : MCQ Option Shuffling : No Is Question Mandatory : No Calculator : None Response Time : N.A Think Time : N.A Minimum Instruction Time : 0**

**Correct Marks : 5 Wrong Marks : 1**

**Question Key Details :**

Key	Value
Comprehension	MCQ

While on a family outing to a nearby mall by the name of 'RB Mall', Mr. Harji saw that most people coming to the mall forgot their mask, and had to pay a fine ranging from ₹500 to ₹2000/-. So he decided to open a shop for selling mask at the mall entrance. Identify the trend:

1. Read Trend
2. See Trend
3. Watch Trend
4. Talk Trend

**Options :**

485584133873. 1  
485584133874. 2  
485584133875. 3  
485584133876. 4



Question Number : 54 Question Id : 48558433469 Question Type : MCQ Option Shuffling : No Is Question Mandatory : No Calculator : None Response Time : N.A Think Time : N.A Minimum Instruction Time : 0

Correct Marks : 5 Wrong Marks : 1

Question Key Details :

Key	Value
Comprehension	MCQ

ਆਰ. ਬੀ. ਮਾਲ ਵਿੱਚ ਪਰਿਵਾਰ ਨਾਲ ਘੁੰਮਦੇ ਹੋਏ ਹਰੀ ਜੀ ਨੇ ਦੇਖਿਆ ਕਿ ਬਹੁਤ ਸਾਰੇ ਲੋਕ ਮਾਸਕ ਦਾ ਇਸਤੇਮਾਲ ਕਰਨਾ ਭੁੱਲ ਜਾਂਦੇ ਹਨ ਅਤੇ ਜਿਸ ਕਰਕੇ ਉਹਨਾਂ ਨੂੰ ₹500 ਤੋਂ ₹2000/- ਤੱਕ ਜੁਰਮਾਨਾ ਦੇਣਾ ਪੈਂਦਾ ਹੈ। ਇਸ ਕਰਕੇ ਉਹਨਾਂ ਨੇ ਮਾਲ ਦੇ ਸ਼ੁਰੂਆਤੀ ਗੇਟ ਤੇ ਮਾਸਕ ਵੇਚਣ ਬਾਰੇ ਸੋਚਿਆ, ਇਸ ਟਰੈਂਡ ਦੀ ਪਛਾਣ ਕਰੋ?

1. ਪੜ੍ਹਨ ਸੰਬੰਧਤ ਟਰੈਂਡ
2. ਵੇਖਣ ਸੰਬੰਧਤ ਟਰੈਂਡ
3. ਦੇਖਣ ਸੰਬੰਧਤ ਟਰੈਂਡ
4. ਬੋਲਚਾਲ ਸੰਬੰਧਤ ਟਰੈਂਡ

Options :

485584133873. 1  
485584133874. 2  
485584133875. 3  
485584133876. 4

Question Number : 55 Question Id : 48558433470 Question Type : MCQ Option Shuffling : No Is Question Mandatory : No Calculator : None Response Time : N.A Think Time : N.A Minimum Instruction Time : 0

Correct Marks : 5 Wrong Marks : 1

Question Key Details :

Key	Value
Comprehension	MCQ

'Mansukhbhai Prajapati thought of a non-stick pan made from clay and a clay refrigerator that works without electricity.' Which step of creative process is discussed above?

1. Preparation
2. Idea germination
3. Incubation
4. Illumination

Options :

485584133877. 1  
485584133878. 2  
485584133879. 3  
485584133880. 4

Question Number : 55 Question Id : 48558433470 Question Type : MCQ Option Shuffling : No Is Question Mandatory : No Calculator : None Response Time : N.A Think Time : N.A Minimum Instruction Time : 0

Correct Marks : 5 Wrong Marks : 1

Question Key Details :

Key	Value
-----	-------

ਮਨਮੁੱਖ ਭਾਈ ਪਰਜਾਪਤੀ ਨੂੰ ਇੱਕ ਵਿਚਾਰ ਆਇਆ, ਜਿਸ ਵਿੱਚ ਉਹਨਾਂ ਨੇ ਚਿਕਨੀ ਮਿੱਟੀ ਤੋਂ ਇੱਕ ਪੈਨ ਬਣਾਉਣ ਦੀ ਸੋਚੀ ਅਤੇ ਇੱਕ ਐਸਾ ਚਿਕਨੀ ਮਿੱਟੀ ਦਾ ਫਰਿਜ ਬਣਾਉਣ ਦਾ ਸੋਚਿਆ ਜਿਸ ਵਿੱਚ ਬਿਜਲੀ ਦੀ ਲੋੜ ਨਹੀਂ ਹੋਵੇਗੀ। ਇਹ ਕਿਸ ਤਰੀਕੇ ਦੀ ਸੰਰਚਨਾਤਮਕ ਕਿਰਿਆ ਹੈ?

1. ਤਿਆਰੀ
2. ਵਿਚਾਰ ਦਾ ਪਣਪਣਾ
3. ਪਰਫੁੱਲਤ
4. ਪ੍ਰਕਾਸ਼

**Options :**

485584133877. 1  
 485584133878. 2  
 485584133879. 3  
 485584133880. 4

**Question Number : 56 Question Id : 48558433471 Question Type : MCQ Option Shuffling : No Is Question Mandatory : No Calculator : None Response Time : N.A Think Time : N.A Minimum Instruction Time : 0**

**Correct Marks : 5 Wrong Marks : 1**

**Question Key Details :**

Key	Value
Comprehension	MCQ

In which type of opportunity assessment step, you examine an idea through finding out whether the product is present in use and you may think of modifying it for the better use?

1. Level of operation
2. Cost
3. Application and use
4. Competition

**Options :**

485584133881. 1  
 485584133882. 2  
 485584133883. 3  
 485584133884. 4

**Question Number : 56 Question Id : 48558433471 Question Type : MCQ Option Shuffling : No Is Question Mandatory : No Calculator : None Response Time : N.A Think Time : N.A Minimum Instruction Time : 0**

**Correct Marks : 5 Wrong Marks : 1**

**Question Key Details :**

Key	Value
Comprehension	MCQ

ਕਿਸ ਤਰ੍ਹਾਂ ਤੇ ਅਵਸਰ ਅਸੈਸਮੈਂਟ ਵਿੱਚ, ਵਰਤਮਾਨ ਸਮੇਂ ਵਿੱਚ ਵਸਤੂ ਦੀ ਵਰਤੋਂ ਕਰਨੀ ਅਤੇ ਉਸ ਨੂੰ ਬਹਿਤਰ ਬਣਾਉਣ ਲਈ ਤਬਦੀਲੀ ਕਰਨਾ ਜ਼ਰੂਰੀ ਹੈ?

1. ਕਾਰਵਾਈ ਦਾ ਪੱਧਰ
2. ਲਾਗਤ
3. ਲਾਗੂ ਕਰਨਾ ਅਤੇ ਵਰਤੋਂ
4. ਪ੍ਰਤਿਯੋਗਿਤਾ

**Options :**

- 485584133881. 1
- 485584133882. 2
- 485584133883. 3
- 485584133884. 4

**Question Number : 57 Question Id : 48558433472 Question Type : MCQ Option Shuffling : No Is Question Mandatory : No Calculator : None Response Time : N.A Think Time : N.A Minimum Instruction Time : 0**

**Correct Marks : 5 Wrong Marks : 1**

**Question Key Details :**

Key	Value
Comprehension	MCQ

Family dinner, Speciality Tourism, Career Counselling Centres and Ice-cream Parlours are a part of which idea field?

1. Creative Efforts
2. Trading related Ideas
3. Service Sector Ideas
4. Market Driven Ideas

**Options :**

- 485584133885. 1
- 485584133886. 2
- 485584133887. 3
- 485584133888. 4

**Question Number : 57 Question Id : 48558433472 Question Type : MCQ Option Shuffling : No Is Question Mandatory : No Calculator : None Response Time : N.A Think Time : N.A Minimum Instruction Time : 0**

**Correct Marks : 5 Wrong Marks : 1**

**Question Key Details :**

Key	Value
Comprehension	MCQ

ਪਰਿਵਾਰ ਨਾਲ ਭੋਜਨ, ਵਿਸ਼ੇਸ਼ ਟੂਰਿਜ਼ਮ, ਕਰਿਅਰ ਕੌਂਸਲਿੰਗ ਕੇਂਦਰ ਅਤੇ ਆਇਸ-ਕ੍ਰੀਮ ਪਾਰਲਰ ਕਿਸ ਤਰੀਕੇ ਦੇ ਵਿਚਾਰ ਖੇਤਰ ਤੋਂ ਹਨ?

1. ਸੰਰਚਾਤਮ ਕੋਸ਼ਿਸ਼ਾਂ
2. ਵਪਾਰ ਸੰਬੰਧਤ ਕੋਸ਼ਿਸ਼ਾਂ
3. ਸੇਵਾਵਾਂ ਸੰਬੰਧਤ ਕੋਸ਼ਿਸ਼ਾਂ
4. ਬਜ਼ਾਰ ਸੰਬੰਧਤ ਕੋਸ਼ਿਸ਼ਾਂ

**Options :**

485584133885. 1  
485584133886. 2  
485584133887. 3  
485584133888. 4

**Question Number : 58 Question Id : 48558433473 Question Type : MCQ Option Shuffling : No Is Question Mandatory : No Calculator : None Response Time : N.A Think Time : N.A Minimum Instruction Time : 0**

**Correct Marks : 5 Wrong Marks : 1**

**Question Key Details :**

Key	Value
Comprehension	MCQ

Avantika did a course in food preservation and decided to set up her own business of food preservation, canning, freezing and pickling. Identify the type of natural resource used by her:

1. Flowers
2. Medicinal Herbs
3. Citrus and other fruits
4. Horticulture

**Options :**

485584133889. 1  
485584133890. 2  
485584133891. 3  
485584133892. 4

**Question Number : 58 Question Id : 48558433473 Question Type : MCQ Option Shuffling : No Is Question Mandatory : No Calculator : None Response Time : N.A Think Time : N.A Minimum Instruction Time : 0**

**Correct Marks : 5 Wrong Marks : 1**

**Question Key Details :**

Key	Value
Comprehension	MCQ

ਅਵੰਤਿਕਾ ਨੇ ਖਾਧ ਸਮਗਰੀ ਨੂੰ ਸੰਰਖਿਤ ਕਰਨ ਦਾ ਇੱਕ ਕੋਰਸ ਕੀਤਾ ਹੈ ਅਤੇ ਹੁਣ ਉਹ ਇੱਕ ਵਪਾਰ ਸ਼ੁਰੂ ਕਰਨ ਦਾ ਨਿਰਧਾਰਣ ਕਰ ਰਹੀ ਹੈ। ਇਸ ਵਿੱਚ ਖਾਧ ਸਮਗਰੀ ਦਾ ਸੰਰਖਣ, ਕੈਨਿੰਗ, ਫਰੀਜ਼ਿੰਗ ਅਤੇ ਪਿਕਲਿੰਗ ਹੋਵੇਗਾ। ਉਹਨਾਂ ਦੁਆਰਾ ਕੁਦਰਤੀ ਸਰੋਤ ਦੀ ਵਰਤੋਂ ਨੂੰ ਪਛਾਣੋ ?

1. ਫੁੱਲ
2. ਚਿਕਿਤਸਕ ਹਰਬ
3. ਨਿੰਬੂ ਅਤੇ ਹੋਰ ਫਲ
4. ਬਾਗਬਾਨੀ

**Options :**

- 485584133889. 1
- 485584133890. 2
- 485584133891. 3
- 485584133892. 4

**Question Number : 59 Question Id : 48558433474 Question Type : MCQ Option Shuffling : No Is Question Mandatory : No Calculator : None Response Time : N.A Think Time : N.A Minimum Instruction Time : 0**

**Correct Marks : 5 Wrong Marks : 1**

**Question Key Details :**

Key	Value
Comprehension	MCQ

Identify the term related with concept of "gain generated on an investment relative to the amount of money invested by the shareholder".

1. Returns on Investment
2. Capital Gain
3. Return on Equity
4. Economic Order Quantity

**Options :**

- 485584133893. 1
- 485584133894. 2
- 485584133895. 3
- 485584133896. 4

**Question Number : 59 Question Id : 48558433474 Question Type : MCQ Option Shuffling : No Is Question Mandatory : No Calculator : None Response Time : N.A Think Time : N.A Minimum Instruction Time : 0**

**Correct Marks : 5 Wrong Marks : 1**

**Question Key Details :**

Key	Value
Comprehension	MCQ

ਅੰਸ਼ ਧਾਰਕ ਨਿਵੇਸ਼ਕਾਂ ਦੁਆਰਾ ਉਹਨਾਂ ਦੇ ਨਿਵੇਸ਼ ਤੇ ਮਿਲਣ ਵਾਲੇ ਲਾਭਾਸ਼ ਨੂੰ ਕੀ ਆਖਦੇ ਹਨ?

1. ਨਿਵੇਸ਼ ਤੇ ਆਮਦਨ
2. ਪੁੰਜੀ ਲਾਭ
3. ਅੰਸ਼ ਦੇ ਆਮਦਨ
4. ਆਰਥਿਕ ਆਰਡਰ ਸੰਖਿਆ

**Options :**

485584133893. 1  
485584133894. 2  
485584133895. 3  
485584133896. 4

**Question Number : 60 Question Id : 48558433475 Question Type : MCQ Option Shuffling : No Is Question Mandatory : No Calculator : None Response Time : N.A Think Time : N.A Minimum Instruction Time : 0**

**Correct Marks : 5 Wrong Marks : 1**

**Question Key Details :**

Key	Value
Comprehension	MCQ

Shreya has prepared her business plan and is stuck at the marketing plan for her enterprise. Suggest correct steps to her for marketing plan.

- A. Business Situation Analysis
- B. Define marketing Strategy
- C. Conduct SWOT Analysis
- D. Identify the target Market
- E. Establish goals

Choose the correct answer from the options given below:

1. A—B—C—D—E
2. A—D—C—E—B
3. A—C—D—E—B
4. A—D—C—B—E

**Options :**

485584133897. 1  
485584133898. 2  
485584133899. 3  
485584133900. 4

**Question Number : 60 Question Id : 48558433475 Question Type : MCQ Option Shuffling : No Is Question Mandatory : No Calculator : None Response Time : N.A Think Time : N.A Minimum Instruction Time : 0**

**Correct Marks : 5 Wrong Marks : 1**

**Question Key Details :**

Key	Value
Comprehension	MCQ

ਸ਼ਰੇਆ ਨੇ ਆਪਣੀ ਵਪਾਰਕ ਯੋਜਨਾ ਤਿਆਰ ਕਰ ਲਈ ਹੈ ਪਰ ਬਜ਼ਾਰੀਕਰਨ ਦੀ ਯੋਜਨਾ ਸੰਬੰਧੀ ਦੁਵਿਧਾ ਵਿੱਚ ਫ਼ਸੀ ਹੈ। ਉਸਦੀ ਮਾਰਕੀਟਿੰਗ ਯੋਜਨਾ ਲਈ ਲੜੀ ਦੀ ਪਛਾਣ ਕਰੋ?

- A. ਵਪਾਰ ਦੀ ਸਥਿਤੀ ਦਾ ਵਿਸ਼ਲੇਸ਼ਣ
- B. ਬਜ਼ਾਰੀਕਰਨ ਦੀ ਯੋਜਨਾ ਦਾ ਵਰਣਨ
- C. SWOT ਵਿਸ਼ਲੇਸ਼ਣ ਕਰੋ
- D. ਉਦੇਸ਼ਿਤ ਬਜ਼ਾਰ ਦੀ ਪਛਾਣ
- E. ਉਦੇਸ਼ਾਂ ਦੀ ਸਥਾਪਨਾ

ਹੇਠਾਂ ਦਿੱਤੇ ਵਿਕਲਪਾਂ ਵਿੱਚੋਂ ਸਹੀ ਉੱਤਰ ਚੁਣੋ:

- 1. A—B—C—D—E
- 2. A—D—C—E—B
- 3. A—C—D—E—B
- 4. A—D—C—B—E

**Options :**

- 485584133897. 1
- 485584133898. 2
- 485584133899. 3
- 485584133900. 4

**Question Number : 61 Question Id : 48558433476 Question Type : MCQ Option Shuffling : No Is Question Mandatory : No Calculator : None Response Time : N.A Think Time : N.A Minimum Instruction Time : 0**

**Correct Marks : 5 Wrong Marks : 1**

**Question Key Details :**

Key	Value
Comprehension	MCQ

"Thinking in advance, what is to be done, when it is to be done, how to be done and by whom it should be done," defines

- 1. Problem Solving
- 2. Decision Making
- 3. Planning
- 4. Spotting opportunity

**Options :**

- 485584133901. 1
- 485584133902. 2
- 485584133903. 3
- 485584133904. 4

**Question Number : 61 Question Id : 48558433476 Question Type : MCQ Option Shuffling : No Is Question Mandatory : No Calculator : None Response Time : N.A Think Time : N.A Minimum Instruction Time : 0**

**Correct Marks : 5 Wrong Marks : 1**

**Question Key Details :**

Key	Value
-----	-------

ਇਸ ਨੂੰ ਪਹਿਲੇ ਤੋਂ ਹੀ ਸੋਚਨਾ \_\_\_\_\_ ਕਹਿਲਾਉਂਦਾ ਹੈ। ਕੀ ਕਰਨਾ ਹੈ? ਕਦੋਂ ਕਰਨਾ ਹੈ? ਕਿਵੇਂ ਕਰਨਾ ਹੈ? ਕਿਸਨੇ ਕਰਨਾ ਹੈ?

1. ਸਮਸਿਆਵਾਂ ਦਾ ਸਮਾਧਾਨ
2. ਨਿਰਧਾਰਣ
3. ਨਿਯੋਜਨ
4. ਅਵਸਰ ਦੀ ਭਾਲ

**Options :**

485584133901. 1  
485584133902. 2  
485584133903. 3  
485584133904. 4

**Question Number : 62 Question Id : 48558433477 Question Type : MCQ Option Shuffling : No Is Question Mandatory : No Calculator : None Response Time : N.A Think Time : N.A Minimum Instruction Time : 0**

**Correct Marks : 5 Wrong Marks : 1**

**Question Key Details :**

Key	Value
Comprehension	MCQ

'How do we get there' question in marketing plan doesn't discuss:

1. The specific marketing strategy that will be implemented
2. When it will occur ?
3. Who will be responsible for the monitoring of activities ?
4. What need it satisfies ?

**Options :**

485584133905. 1  
485584133906. 2  
485584133907. 3  
485584133908. 4

**Question Number : 62 Question Id : 48558433477 Question Type : MCQ Option Shuffling : No Is Question Mandatory : No Calculator : None Response Time : N.A Think Time : N.A Minimum Instruction Time : 0**

**Correct Marks : 5 Wrong Marks : 1**

**Question Key Details :**

Key	Value
Comprehension	MCQ



" ਅਸੀਂ ਉੱਥੇ ਕਿਸ ਤਰ੍ਹਾਂ ਪਹੁੰਚਨਾ ਹੈ " ਬਜ਼ਾਰੀਕਰਣ ਦੇ ਨਿਯੋਜਨ ਵਿੱਚ ਇਹ ਪ੍ਰਸ਼ਨ ਕਿਸ ਬਾਰੇ ਗੱਲ ਨਹੀਂ ਕਰਦਾ:-

1. ਇੱਕ ਵਿਸ਼ੇਸ਼ ਵਪਾਰਕ ਯੋਜਨਾ ਜੋ ਲਾਗੂ ਹੋਵੇਗੀ
2. ਇਹ ਕਦੋਂ ਹੋਵੇਗੀ ?
3. ਕਾਰਜਸ਼ੀਲ ਗਤੀਸ਼ੀਲਤਾ ਲਈ ਕੋਣ ਜ਼ਿੰਮੇਵਾਰ ਹੋਵੇਗਾ ?
4. ਇਹ ਕਿਸ ਚੀਜ਼ ਦੀ ਸੰਤੁਸ਼ਟੀ ਕਰਦਾ ਹੈ

**Options :**

485584133905. 1  
485584133906. 2  
485584133907. 3  
485584133908. 4

**Question Number : 63 Question Id : 48558433478 Question Type : MCQ Option Shuffling : No Is Question Mandatory : No Calculator : None Response Time : N.A Think Time : N.A Minimum Instruction Time : 0**

**Correct Marks : 5 Wrong Marks : 1**

**Question Key Details :**

Key	Value
Comprehension	MCQ

Raghav is the owner of a business. He wants to transfer his ownership to his daughter Poorvi. He can do this without taking permission from anyone if the business is a \_\_\_\_\_ (Fill in the blank.)

1. Partnership firm
2. Public limited company
3. Private limited company
4. Sole Proprietorship

**Options :**

485584133909. 1  
485584133910. 2  
485584133911. 3  
485584133912. 4

**Question Number : 63 Question Id : 48558433478 Question Type : MCQ Option Shuffling : No Is Question Mandatory : No Calculator : None Response Time : N.A Think Time : N.A Minimum Instruction Time : 0**

**Correct Marks : 5 Wrong Marks : 1**

**Question Key Details :**

Key	Value
Comprehension	MCQ

ਰਾਘਵ ਇੱਕ ਵਪਾਰ ਦਾ ਮਾਲਿਕ ਹੈ। ਉਹ ਮਲਕੀਅਤ ਨੂੰ ਆਪਣੀ ਬੇਟੀ " ਪੂਰਵੀ " ਨੂੰ ਦੇਣਾ ਚਹੁੰਦਾ ਹੈ। ਉਹ ਬਾਕੀ ਮਾਲਕਾਂ ਦੀ ਸਲਾਹ ਤੇ ਆਗਿਆ ਤੋਂ ਬਿਨਾਂ ਇਹ ਕਰ ਸਕਦਾ ਹੈ, ਜੇਕਰ ਉਸਦਾ ਵਪਾਰ ਇੱਕ \_\_\_\_\_ ਹੋਵੇ

1. ਸਾਝੇਦਾਰੀ ਵਾਲੀ ਫਰਮ ਹੈ।
2. ਸਾਰਵਜਨਿਕ ਸੀਮਿਤ ਕੰਪਨੀ ਹੈ।
3. ਨਿਜੀ ਸੀਮਿਤ ਕੰਪਨੀ ਹੈ।
4. ਇੱਕਲੀ ਮਾਲਕੀ

**Options :**

- 485584133909. 1
- 485584133910. 2
- 485584133911. 3
- 485584133912. 4

**Question Number : 64 Question Id : 48558433479 Question Type : MCQ Option Shuffling : No Is Question Mandatory : No Calculator : None Response Time : N.A Think Time : N.A Minimum Instruction Time : 0**

**Correct Marks : 5 Wrong Marks : 1**

**Question Key Details :**

Key	Value
Comprehension	MCQ

\_\_\_\_\_ element of business plan helps the entrepreneur to carefully evaluate and decide the legal structure of the organisation. Fill in the above blank with correct option:

1. Organisational plan
2. Marketing plan
3. Financial plan
4. Production plan

**Options :**

- 485584133913. 1
- 485584133914. 2
- 485584133915. 3
- 485584133916. 4

**Question Number : 64 Question Id : 48558433479 Question Type : MCQ Option Shuffling : No Is Question Mandatory : No Calculator : None Response Time : N.A Think Time : N.A Minimum Instruction Time : 0**

**Correct Marks : 5 Wrong Marks : 1**

**Question Key Details :**

Key	Value
Comprehension	MCQ

\_\_\_\_\_ ਦੇ ਵਪਾਰਕ ਤੱਤ ਇੱਕ ਉਦਯੋਗਪਤੀ ਨੂੰ ਕਾਨੂੰਨੀ ਢਾਂਚੇ ਦੀ ਧਿਆਨ ਨਾਲ ਤਸਦੀਕ ਅਤੇ ਨਿਰਧਾਰਣ ਕਰਨ ਵਿੱਚ ਮਦਦ ਕਰਦਾ ਹੈ। ਸਹੀ ਵਿਕਲਪ ਚੁਣੋ?

1. ਸੰਗਠਨ ਯੋਜਨਾ
2. ਬਜ਼ਾਰੀਕਰਣ ਯੋਜਨਾ
3. ਵਿੱਤੀ ਯੋਜਨਾ
4. ਉਤਪਾਦਨ ਯੋਜਨਾ

**Options :**

485584133913. 1  
485584133914. 2  
485584133915. 3  
485584133916. 4

**Question Number : 65 Question Id : 48558433480 Question Type : MCQ Option Shuffling : No Is Question Mandatory : No Calculator : None Response Time : N.A Think Time : N.A Minimum Instruction Time : 0**

**Correct Marks : 5 Wrong Marks : 1**

**Question Key Details :**

Key	Value
Comprehension	MCQ

Mannat, a student of entrepreneurship decided to start her venture of manufacturing "Flood rescuing raft". For funding, she contacted one of the angel investors who suggested her to prepare a three minute summary of her business plan. Identify from the following options, the format of business plan suggested to Mannat, which is often used as a teaser to awaken the interest of potential funders, customers etc.

1. A well written presentation for external shareholders
2. An internal operational plan
3. A pitch deck with oral narratives
4. Elevator pitch

**Options :**

485584133917. 1  
485584133918. 2  
485584133919. 3  
485584133920. 4

**Question Number : 65 Question Id : 48558433480 Question Type : MCQ Option Shuffling : No Is Question Mandatory : No Calculator : None Response Time : N.A Think Time : N.A Minimum Instruction Time : 0**

**Correct Marks : 5 Wrong Marks : 1**

**Question Key Details :**

Key	Value
Comprehension	MCQ

ਮੰਨਤ ਇੱਕ ਉਦਯੋਗੀਕਰਨ ਖੇਤਰ ਦੀ ਵਿਦਿਆਰਥਣ ਹੈ, ਜਿਸਨੇ ਹੜ ਤੋਂ ਬਚਾਅ ਲਈ ਕਿਸ਼ਤੀ ਦੇ ਨਿਰਮਾਣ ਸੰਬੰਧਤ ਵਪਾਰ ਦੀ ਸ਼ੁਰੂਆਤ ਕਰਨ ਬਾਰੇ ਸੋਚਿਆ। ਨਿਵੇਸ਼ ਲਈ ਉਸਨੇ ਇੱਕ ਏਂਜਲ ਨਿਵੇਸ਼ਕ ਨਾਲ ਰਾਬਤਾ ਕੀਤਾ ਅਤੇ ਉਸਨੇ ਵਪਾਰ ਸੰਬੰਧਿਤ ਇੱਕ ਤਿੰਨ ਮਿੰਟ ਦੀ ਸਾਰਣੀ ਬਣਾਉਣ ਦੀ ਸਲਾਹ ਦਿੱਤੀ। ਨਿਵੇਸ਼ਕ, ਸਮਰਥ ਦੇਣਦਾਰ ਅਤੇ ਗਾਹਕਾਂ ਦੇ ਹਿੱਤਾਂ ਲਈ ਅਤੇ ਪ੍ਰਤੋਸਾਹਨ ਲਈ ਮੰਨਤ ਨੂੰ ਦਿੱਤੀ ਗਈ ਸਲਾਹ ਦੇ ਬਿਜਨੇਸ ਪਲਾਨ ਦੀ ਪਛਾਣ ਕਰੋ।

1. ਬਾਹਰਲੀ ਅੰਸ਼ਪਾਰਕਾਂ ਲਈ ਇੱਕ ਸੁਲਿਖਤ ਪ੍ਰਦਰਸ਼ਨੀ
2. ਅੰਦਰੂਨੀ ਕਾਰਜਸ਼ੀਲ ਯੋਜਨਾ
3. ਇੱਕ ਪਿੱਚ ਡੈੱਕ ਜੋ ਮੌਖਿਕ ਵਿਰਤਾਂਤ ਨਾਲ ਸੰਬੰਧਤ ਹੋਵੇ।
4. ਐਲੀਵੇਟਰ ਪਿੱਚ

**Options :**

- 485584133917. 1
- 485584133918. 2
- 485584133919. 3
- 485584133920. 4

**Question Number : 66 Question Id : 48558433481 Question Type : MCQ Option Shuffling : No Is Question Mandatory : No Calculator : None Response Time : N.A Think Time : N.A Minimum Instruction Time : 0**

**Correct Marks : 5 Wrong Marks : 1**

**Question Key Details :**

Key	Value
Comprehension	MCQ

Select the option that enlists all the micro environment factors from the following

- A. Competition
- B. Rate of Inflation
- C. Suppliers
- D. Customers
- E. Size of young population of India.

Choose the correct answer from the options given below:

1. B, D, E only
2. A, C, D only
3. C, D, E only
4. B, C, D only

**Options :**

- 485584133921. 1
- 485584133922. 2
- 485584133923. 3
- 485584133924. 4

**Question Number : 66 Question Id : 48558433481 Question Type : MCQ Option Shuffling : No Is Question Mandatory : No Calculator : None Response Time : N.A Think Time : N.A Minimum Instruction Time : 0**

**Correct Marks : 5 Wrong Marks : 1**

**Question Key Details :**

Key	Value
Comprehension	MCQ

ਹੇਠ ਲਿਖਿਆਂ ਵਿੱਚੋਂ ਮਾਈਕਰੋ ਵਾਤਾਵਰਨ ਨਾਲ ਸੰਬੰਧਤ ਵਿਕਲਪ ਦੀ ਪਛਾਣ ਕਰੋ?

- A. ਪ੍ਰਤੀਯੋਗਿਤਾ
- B. ਮੁਦਰਾ ਸਥਿਤੀ ਦੀ ਦਰ
- C. ਪ੍ਰਵਾਹ ਕਰਤਾ
- D. ਗਾਹਕ
- E. ਭਾਰਤ ਵਿੱਚੋਂ ਨੌਜਵਾਨ ਜਨਸੰਖਿਆ ਦਾ ਪੱਧਰ

ਹੇਠਾਂ ਦਿੱਤੇ ਵਿਕਲਪਾਂ ਵਿੱਚੋਂ ਸਹੀ ਉੱਤਰ ਚੁਣੋ:

- 1. ਸਿਰਫ਼ B, D, E
- 2. ਸਿਰਫ਼ A, C, D
- 3. ਸਿਰਫ਼ C, D, E
- 4. ਸਿਰਫ਼ B, C, D

**Options :**

- 485584133921. 1
- 485584133922. 2
- 485584133923. 3
- 485584133924. 4

**Question Number : 67 Question Id : 48558433482 Question Type : MCQ Option Shuffling : No Is Question Mandatory : No Calculator : None Response Time : N.A Think Time : N.A Minimum Instruction Time : 0**

**Correct Marks : 5 Wrong Marks : 1**

**Question Key Details :**

Key	Value
Comprehension	MCQ

Match List I with List II

LIST I Components of financial plan		LIST II Features	
A.	Proforma investment decision	I.	The amount of cash available
B.	Proforma Financing decision	II.	How much funds are required
C.	Proforma cash flow	III.	Protected net profit
D.	Proforma Income Statement	IV.	Where will funds come from

Choose the correct answer from the options given below:

- 1. A-I, B-II, C-III, D-IV
- 2. A-II, B-IV, C-I, D-III
- 3. A-IV, B-III, C-II, D-I
- 4. A-III, B-II, C-I, D-IV

**Options :**

485584133925. 1  
 485584133926. 2  
 485584133927. 3  
 485584133928. 4

**Question Number : 67 Question Id : 48558433482 Question Type : MCQ Option Shuffling : No Is Question Mandatory : No Calculator : None Response Time : N.A Think Time : N.A Minimum Instruction Time : 0**

**Correct Marks : 5 Wrong Marks : 1**

**Question Key Details :**

Key	Value
Comprehension	MCQ

ਸੂਚੀ I ਦਾ ਸੂਚੀ II ਨਾਲ ਮਿਲਾਣ ਕਰੋ:

ਸੂਚੀ I ਵਿੱਤ ਨਿਯੋਜਨ ਦੇ ਅੰਗ		ਸੂਚੀ II ਵਿਸ਼ੇਸ਼ਤਾਵਾਂ	
A.	ਪ੍ਰਫੇਰਮਾ ਨਿਵੇਸ਼ ਨਿਰਧਾਰਣ	I.	ਨਕਦੀ ਦੀ ਉਪਲਬੱਧੀ
B.	ਪ੍ਰਫੇਰਮਾ ਵਿੱਤੀ ਨਿਰਧਾਰਣ	II.	ਕਿੰਨੋ ਪੈਸਿਆਂ ਦੀ ਜ਼ਰੂਰਤ ਹੈ
C.	ਪ੍ਰਫੇਰਮਾ ਨਕਦੀ ਪ੍ਰਵਾਹ	III.	ਸੁਰੱਖਿਅਤ ਸ਼ੁੱਧ ਆਮਦਨ
D.	ਪ੍ਰਫੇਰਮਾ ਆਮਦਨ ਸਾਰਣੀ	IV.	ਪੈਸੇ ਕਿੱਥੇ ਆਉਣਗੇ

ਹੇਠਾਂ ਦਿੱਤੇ ਵਿਕਲਪਾਂ ਵਿੱਚੋਂ ਸਹੀ ਉੱਤਰ ਚੁਣੋ:

1. A-I, B-II, C-III, D-IV
2. A-II, B-IV, C-I, D-III
3. A-IV, B-III, C-II, D-I
4. A-III, B-II, C-I, D-IV

**Options :**

485584133925. 1  
 485584133926. 2  
 485584133927. 3  
 485584133928. 4

**Question Number : 68 Question Id : 48558433483 Question Type : MCQ Option Shuffling : No Is Question Mandatory : No Calculator : None Response Time : N.A Think Time : N.A Minimum Instruction Time : 0**

**Correct Marks : 5 Wrong Marks : 1**

**Question Key Details :**

Key	Value
Comprehension	MCQ

A good advertising catches the eye or ear of the audience. The correct order of remaining stages is:

- A. Interest
- B. Action
- C. Attention
- D. Desire

Choose the correct answer from the options given below:

1. A, B, C only
2. A, D, B only
3. B, D only
4. D, A, B only

**Options :**

- 485584133929. 1
- 485584133930. 2
- 485584133931. 3
- 485584133932. 4

**Question Number : 68 Question Id : 48558433483 Question Type : MCQ Option Shuffling : No Is Question Mandatory : No Calculator : None Response Time : N.A Think Time : N.A Minimum Instruction Time : 0**

**Correct Marks : 5 Wrong Marks : 1**

**Question Key Details :**

Key	Value
Comprehension	MCQ

ਇੱਕ ਚੰਗੀ ਮਸ਼ਹੂਰੀ ਜਨਤਾ ਦੀ ਅੱਖਾਂ ਜਾ ਕੰਨ ਤੱਕ ਪਹੁੰਚਦੀ ਹੈ, ਰਹਿੰਦੇ ਪੱਧਰ ਹਨ?

- A. ਹਿੱਤ
- B. ਕਾਰਵਾਈ
- C. ਧਿਆਨ
- D. ਇੱਛਾ

ਹੇਠਾਂ ਦਿੱਤੇ ਵਿਕਲਪਾਂ ਵਿੱਚੋਂ ਸਹੀ ਉੱਤਰ ਚੁਣੋ:

1. ਸਿਰਫ਼ A, B, C
2. ਸਿਰਫ਼ A, D, B
3. ਸਿਰਫ਼ B, D
4. ਸਿਰਫ਼ D, A, B

**Options :**

- 485584133929. 1
- 485584133930. 2
- 485584133931. 3
- 485584133932. 4

Question Number : 69 Question Id : 48558433484 Question Type : MCQ Option Shuffling : No Is Question Mandatory : No Calculator : None Response Time : N.A Think Time : N.A Minimum Instruction Time : 0

Correct Marks : 5 Wrong Marks : 1

Question Key Details :

Key	Value
Comprehension	MCQ

' A Patent' :

1. Gives the creator of original work exclusive rights
2. Grants an inventor the right to exclude others from using or selling an invention
3. A recognizable sign, design or expression
4. Protects the visual design of objects that are not purely utilitarian

Options :

- 485584133933. 1
- 485584133934. 2
- 485584133935. 3
- 485584133936. 4

Question Number : 69 Question Id : 48558433484 Question Type : MCQ Option Shuffling : No Is Question Mandatory : No Calculator : None Response Time : N.A Think Time : N.A Minimum Instruction Time : 0

Correct Marks : 5 Wrong Marks : 1

Question Key Details :

Key	Value
Comprehension	MCQ

ਪੇਟੈਂਟ

1. ਸੰਰਚਨਾ ਕਰਣ ਵਾਲੇ ਨੂੰ ਵਿਸ਼ੇਸ਼ ਅਧਿਕਾਰ ਦਿੰਦਾ ਹੈ।
2. ਕਾਢੀ ਨੂੰ ਇਹ ਅਧਿਕਾਰ ਦਿੰਦਾ ਹੈ ਕਿ ਉਹ ਦੂਜਿਆਂ ਨੂੰ ਕਾਢ ਨੂੰ ਇਸਤੇਮਾਲ ਕਰਣ ਅਤੇ ਵੇਚਣ ਤੋਂ ਦੂਰ ਰੱਖ ਸਕੇ
3. ਇੱਕ ਪਛਾਣੇ ਜਾਣ ਵਾਲਾ ਨਿਸ਼ਾਨ, ਡਿਜ਼ਾਇਨ ਜਾਂ ਐਕਸਪ੍ਰੈਸ਼ਨ
4. ਵਸਤੂ ਦੇ ਦ੍ਰਿਸ਼ਟ ਡਿਜ਼ਾਇਨ ਦੀ ਰਖਿਆ ਕਰਨਾ ਜੋ ਇੱਕ ਪੱਖੀ ਨਹੀਂ ਹਨ।

Options :

- 485584133933. 1
- 485584133934. 2
- 485584133935. 3
- 485584133936. 4

Question Number : 70 Question Id : 48558433485 Question Type : MCQ Option Shuffling : No Is Question Mandatory : No Calculator : None Response Time : N.A Think Time : N.A Minimum Instruction Time : 0

Correct Marks : 5 Wrong Marks : 1

Question Key Details :

Key	Value
Comprehension	MCQ



Match List I with List II

LIST I		LIST II	
A.	Product	I.	Method to spread the word about the product or service
B.	Price	II.	Item actually being sold
C.	Place	III.	Value put on a product
D.	Promotion	IV.	Path along which goods move from producers to consumers

Choose the correct answer from the options given below:

1. A-IV, B-II, C-I, D-III
2. A-III, B-II, C-IV, D-I
3. A-II, B-I, C-IV, D-III
4. A-II, B-III, C-IV, D-I

**Options :**

485584133937. 1  
 485584133938. 2  
 485584133939. 3  
 485584133940. 4

**Question Number : 70 Question Id : 48558433485 Question Type : MCQ Option Shuffling : No Is Question Mandatory : No Calculator : None Response Time : N.A Think Time : N.A Minimum Instruction Time : 0**

**Correct Marks : 5 Wrong Marks : 1**

**Question Key Details :**

Key	Value
Comprehension	MCQ

ਸੂਚੀ I ਦਾ ਸੂਚੀ II ਨਾਲ ਮਿਲਾਣ ਕਰੋ:

ਸੂਚੀ I		ਸੂਚੀ II	
A.	ਵਸਤੂ	I.	ਵਸਤੂ ਅਤੇ ਸੇਵਾਵਾਂ ਦੇ ਪ੍ਰਸਾਰ ਦੀ ਵਿਧੀ
B.	ਕੀਮਤ	II.	ਵਸਤੂ ਦਾ ਅਸਲ ਵਿੱਚ ਬੇਚਿਆ ਜਾਣਾ
C.	ਸਥਾਨ	III.	ਵਸਤੂ ਉੱਤੇ ਕੀ ਮੁੱਲ ਰੱਖਿਆ ਹੈ
D.	ਪ੍ਰਸਾਰ	IV.	ਉਤਪਾਦਨ ਤੋਂ ਖਪਤਕਾਰਾਂ ਵਿੱਚ ਵਸਤੂ ਦੀ ਗਤੀਸ਼ੀਲਤਾ ਦੇ ਰਾਸਤੇ ਨੂੰ ਨਿਰਧਾਰਿਤ ਕਰਨਾ

ਹੇਠਾਂ ਦਿੱਤੇ ਵਿਕਲਪਾਂ ਵਿੱਚੋਂ ਸਹੀ ਉੱਤਰ ਚੁਣੋ:

1. A-IV, B-II, C-I, D-III
2. A-III, B-II, C-IV, D-I
3. A-II, B-I, C-IV, D-III
4. A-II, B-III, C-IV, D-I

**Options :**

485584133937. 1  
 485584133938. 2  
 485584133939. 3

**Question Number : 71 Question Id : 48558433486 Question Type : MCQ Option Shuffling : No Is Question Mandatory : No Calculator : None Response Time : N.A Think Time : N.A Minimum Instruction Time : 0**

**Correct Marks : 5 Wrong Marks : 1**

**Question Key Details :**

Key	Value
Comprehension	MCQ

Identify the correct statements

- A. A logo is used as a short path for advertising.
- B. A logo anchors company's brand.
- C. A logo is only used by individuals.
- D. A logo has to be completely graphic.
- E. A logo is also called logotype.

Choose the correct answer from the options given below:

- 1. A, B only
- 2. A, B, E only
- 3. A, E only
- 4. C, E only

**Options :**

- 485584133941. 1
- 485584133942. 2
- 485584133943. 3
- 485584133944. 4

**Question Number : 71 Question Id : 48558433486 Question Type : MCQ Option Shuffling : No Is Question Mandatory : No Calculator : None Response Time : N.A Think Time : N.A Minimum Instruction Time : 0**

**Correct Marks : 5 Wrong Marks : 1**

**Question Key Details :**

Key	Value
Comprehension	MCQ

ਸਹੀ ਕਥਨਾਂ ਦੀ ਪਛਾਣ ਕਰੋ?

- A. ਇੱਕ ਲੋਗੋ ਮਸ਼ਹੂਰੀ ਲਈ ਇੱਕ ਅਲਪ ਰਾਹ ਹੈ।
- B. ਇੱਕ ਲੋਗੋ ਕੰਪਨੀ ਦੇ ਬ੍ਰਾਂਡ ਨੂੰ ਮਜ਼ਬੂਤੀ ਪ੍ਰਦਾਨ ਕਰਦਾ ਹੈ।
- C. ਇੱਕ ਲੋਗੋ ਸਿਰਫ਼ ਵਿਅਕਤੀ ਦੁਆਰਾ ਪ੍ਰਯੋਗ ਹੁੰਦਾ ਹੈ।
- D. ਇੱਕ ਲੋਗੋ ਨੂੰ ਸਿਰਫ਼ ਗ੍ਰਾਫਿਕ ਹੋਣਾ ਚਾਹੀਦਾ ਹੈ।
- E. ਇੱਕ ਲੋਗੋ ਨੂੰ ਲੋਗੋਟਾਇਪ ਕਿਹਾ ਜਾਂਦਾ ਹੈ।

ਹੇਠਾਂ ਦਿੱਤੇ ਵਿਕਲਪਾਂ ਵਿੱਚੋਂ ਸਹੀ ਉੱਤਰ ਚੁਣੋ:

- 1. ਸਿਰਫ਼ A, B
- 2. ਸਿਰਫ਼ A, B, E
- 3. ਸਿਰਫ਼ A, E
- 4. ਸਿਰਫ਼ C, E

**Options :**

- 485584133941. 1
- 485584133942. 2
- 485584133943. 3
- 485584133944. 4

**Question Number : 72 Question Id : 48558433487 Question Type : MCQ Option Shuffling : No Is Question Mandatory : No Calculator : None Response Time : N.A Think Time : N.A Minimum Instruction Time : 0**

**Correct Marks : 5 Wrong Marks : 1**

**Question Key Details :**

Key	Value
Comprehension	MCQ

When, with the merger of two companies, the combined value of the entity is more than the sum total of their individual company value, it is called as \_\_\_\_\_;

- 1. Competency
- 2. Value addition
- 3. Synergy
- 4. Conglomerate

**Options :**

- 485584133945. 1
- 485584133946. 2
- 485584133947. 3
- 485584133948. 4

**Question Number : 72 Question Id : 48558433487 Question Type : MCQ Option Shuffling : No Is Question Mandatory : No Calculator : None Response Time : N.A Think Time : N.A Minimum Instruction Time : 0**

**Correct Marks : 5 Wrong Marks : 1**

**Question Key Details :**

Key	Value
-----	-------

ਜਦੋਂ ਦੋ ਕੰਪਨੀਆਂ ਦੇ ਮਿਲਾਪ ਨਾਲ ਉਹਨਾਂ ਦਾ ਮੁੱਲ ਕੰਪਨੀ ਦੇ ਇੱਕਲੇ ਮੁਲਾਂ ਨਾਲੋਂ ਜ਼ਿਆਦਾ ਹੋਵੇ ਤਾਂ ਇਸਨੂੰ ਕੀ ਕਹਿੰਦੇ ਹਨ?

1. ਯੋਗਤਾਂ
2. ਵੈਲਯੂ ਐਡੀਸ਼ਨ
3. ਸਿਨਰਜੀ
4. ਕਾਂਗਲੋਮੇਰੇਟ

**Options :**

485584133945. 1  
 485584133946. 2  
 485584133947. 3  
 485584133948. 4

**Question Number : 73 Question Id : 48558433488 Question Type : MCQ Option Shuffling : No Is Question Mandatory : No Calculator : None Response Time : N.A Think Time : N.A Minimum Instruction Time : 0**

**Correct Marks : 5 Wrong Marks : 1**

**Question Key Details :**

Key	Value
Comprehension	MCQ

"Rohan took an agency of MRF tyres & opened a shop at Lajpat Nagar market".

Which type of franchising is discussed in the above paragraph?

1. Manufacturing franchise opportunity
2. Product franchise business opportunity
3. Business franchise opportunity venture
4. Business format franchise opportunity

**Options :**

485584133949. 1  
 485584133950. 2  
 485584133951. 3  
 485584133952. 4

**Question Number : 73 Question Id : 48558433488 Question Type : MCQ Option Shuffling : No Is Question Mandatory : No Calculator : None Response Time : N.A Think Time : N.A Minimum Instruction Time : 0**

**Correct Marks : 5 Wrong Marks : 1**

**Question Key Details :**

Key	Value
Comprehension	MCQ

ਰੋਹਨ ਨੇ MRF ਟਾਇਰਾਂ ਦੀ ਏਜੰਸੀ ਲਈ ਅਤੇ ਲਾਜਪਤ ਨਗਰ ਵਿੱਚ ਇੱਕ ਦੁਕਾਨ ਖੋਲੀ। ਇਹ ਕਿਸ ਤਰ੍ਹਾਂ ਦਾ ਫਰੈਂਚਾਇਜ਼ਿਸ ਅਧਿਕਾਰ ਹੈ?

1. ਉਤਪਾਦਨ ਫਰੈਂਚਾਇਜ਼ ਅਧਿਕਾਰ
2. ਵਸਤੂ ਦਾ ਫਰੈਂਚਾਇਜ਼ ਅਧਿਕਾਰ
3. ਵਪਾਰਕ ਫਰੈਂਚਾਇਜ਼ ਅਧਿਕਾਰ
4. ਵਪਾਰਕ ਢਾਂਚਾ ਫਰੈਂਚਾਇਜ਼ ਅਧਿਕਾਰ

**Options :**

485584133949. 1  
485584133950. 2  
485584133951. 3  
485584133952. 4

**Question Number : 74 Question Id : 48558433489 Question Type : MCQ Option Shuffling : No Is Question Mandatory : No Calculator : None Response Time : N.A Think Time : N.A Minimum Instruction Time : 0**

**Correct Marks : 5 Wrong Marks : 1**

**Question Key Details :**

Key	Value
Comprehension	MCQ

Which of the following is NOT the advantage of franchising from the point of view of franchisee?

1. Product Acceptance
2. Knowledge of the market
3. Quick Expansion
4. Management expertise

**Options :**

485584133953. 1  
485584133954. 2  
485584133955. 3  
485584133956. 4

**Question Number : 74 Question Id : 48558433489 Question Type : MCQ Option Shuffling : No Is Question Mandatory : No Calculator : None Response Time : N.A Think Time : N.A Minimum Instruction Time : 0**

**Correct Marks : 5 Wrong Marks : 1**

**Question Key Details :**

Key	Value
Comprehension	MCQ

ਫਰੈਂਚਾਇਜ਼ ਲੈਣ ਵਾਲੇ ਲਈ ਹੇਠ ਲਿਖਿਆਂ ਵਿੱਚੋਂ ਕਿਹੜਾ ਫਰੈਂਚਾਇਜ਼ ਦੇ ਪੱਖ ਤੋਂ ਲਾਭਦਾਇਕ ਨਹੀਂ ?

1. ਵਸਤੂ ਦੀ ਸਵੀਕ੍ਰਿਤੀ
2. ਬਜ਼ਾਰ ਦਾ ਗਿਆਨ
3. ਜਲਦੀ ਹੋਣ ਵਾਲਾ ਵਿਸਤਾਰ
4. ਪ੍ਰਬੰਧਨ ਦੀ ਮਹਾਰਤ

**Options :**

485584133953. 1  
485584133954. 2  
485584133955. 3  
485584133956. 4

**Question Number : 75 Question Id : 48558433490 Question Type : MCQ Option Shuffling : No Is Question Mandatory : No Calculator : None Response Time : N.A Think Time : N.A Minimum Instruction Time : 0**

**Correct Marks : 5 Wrong Marks : 1**

**Question Key Details :**

Key	Value
Comprehension	MCQ

A merger between the two soft drink manufacturing company in Jaipur is an example of :

1. Conglomerate
2. Market extension mergers
3. Product extension mergers
4. Horizontal merger

**Options :**

485584133957. 1  
485584133958. 2  
485584133959. 3  
485584133960. 4

**Question Number : 75 Question Id : 48558433490 Question Type : MCQ Option Shuffling : No Is Question Mandatory : No Calculator : None Response Time : N.A Think Time : N.A Minimum Instruction Time : 0**

**Correct Marks : 5 Wrong Marks : 1**

**Question Key Details :**

Key	Value
Comprehension	MCQ

ਦੇ ਸਾਫਟ- ਡ੍ਰਿੰਕ ਕੰਪਨੀਆਂ ਦੇ ਆਪਸੀ ਮਿਲਣ ਨੂੰ \_\_\_\_\_ ਦੀ ਉਦਾਹਰਨ ਕਰਦੇ ਹਨ ?

1. ਕੋਨਗਲੋਮੇਰੇਟ
2. ਬਜ਼ਾਰ ਦੇ ਵਿਸਤਾਰ ਦਾ ਮਿਲਣ
3. ਵਸਤੂ ਵਧੀਕ ਮਿਲਣ
4. ਲੇਟਨਾ /ਸਮਾਨ ਪੱਧਰ ਤੇ ਮਿਲਣ

**Options :**

485584133957. 1  
485584133958. 2  
485584133959. 3  
485584133960. 4

**Question Number : 76 Question Id : 48558433491 Question Type : MCQ Option Shuffling : No Is Question Mandatory : No Calculator : None Response Time : N.A Think Time : N.A Minimum Instruction Time : 0**

**Correct Marks : 5 Wrong Marks : 1**

**Question Key Details :**

Key	Value
Comprehension	MCQ

Costs involved with receipt of goods, inspection of goods is known as \_\_\_\_\_.

1. Purchased cost of inventory
2. Ordering cost
3. Holding cost
4. EOQ (Economic Order Quantity)

**Options :**

485584133961. 1  
485584133962. 2  
485584133963. 3  
485584133964. 4

**Question Number : 76 Question Id : 48558433491 Question Type : MCQ Option Shuffling : No Is Question Mandatory : No Calculator : None Response Time : N.A Think Time : N.A Minimum Instruction Time : 0**

**Correct Marks : 5 Wrong Marks : 1**

**Question Key Details :**

Key	Value
Comprehension	MCQ

ਵਸਤੂ / ਸਮਾਨ ਦੀ ਪ੍ਰਾਪਤੀ, ਤਸਦੀਕ ਕਰਨ ਦੀ ਲਾਗਤ ਨੂੰ \_\_\_\_\_ ਕਹਿੰਦੇ ਹਨ?

1. ਸਮਾਨ / ਮਾਲ ਦਾ ਖਪਤ ਲਾਗਤ ਮੁੱਲ
2. ਆਰਡਰ ਲਾਗਤ
3. ਰੱਖ-ਰਖਾਵ
4. EOQ

**Options :**

- 485584133961. 1
- 485584133962. 2
- 485584133963. 3
- 485584133964. 4

**Question Number : 77 Question Id : 48558433492 Question Type : MCQ Option Shuffling : No Is Question Mandatory : No Calculator : None Response Time : N.A Think Time : N.A Minimum Instruction Time : 0**

**Correct Marks : 5 Wrong Marks : 1**

**Question Key Details :**

Key	Value
Comprehension	MCQ

Money needed to fund the normal day to day operations of a business is:

1. Working Capital
2. Shareholders funds
3. Depreciation
4. Interest

**Options :**

- 485584133965. 1
- 485584133966. 2
- 485584133967. 3
- 485584133968. 4

**Question Number : 77 Question Id : 48558433492 Question Type : MCQ Option Shuffling : No Is Question Mandatory : No Calculator : None Response Time : N.A Think Time : N.A Minimum Instruction Time : 0**

**Correct Marks : 5 Wrong Marks : 1**

**Question Key Details :**

Key	Value
Comprehension	MCQ



ਰੋਜ਼ਮਰਾ ਦੇ ਕਾਰਜ ਲਈ ਪੈਸਿਆਂ ਦੀ ਜਰੂਰਤ ਨੂੰ \_\_\_\_\_ ਆਖਦੇ ਹਨ?

1. ਕਾਰਜਸ਼ੀਲ ਪੂੰਜੀ
2. ਅੰਸ਼ਧਾਰਕਾਂ ਦੇ ਫੰਡ
3. ਗਿਰਾਵਟ
4. ਵਿਆਜ

**Options :**

485584133965. 1  
485584133966. 2  
485584133967. 3  
485584133968. 4

**Question Number : 78 Question Id : 48558433493 Question Type : MCQ Option Shuffling : No Is Question Mandatory : No Calculator : None Response Time : N.A Think Time : N.A Minimum Instruction Time : 0**

**Correct Marks : 5 Wrong Marks : 1**

**Question Key Details :**

Key	Value
Comprehension	MCQ

Net working capital can be calculated using:

- A. Current assets
- B. Non-current assets
- C. Current Liabilities
- D. Non-current Liabilities
- E. Shareholder's funds

Choose the correct answer from the options given below:

1. A and D only
2. A and B only
3. A and C only
4. D and E only

**Options :**

485584133969. 1  
485584133970. 2  
485584133971. 3  
485584133972. 4

**Question Number : 78 Question Id : 48558433493 Question Type : MCQ Option Shuffling : No Is Question Mandatory : No Calculator : None Response Time : N.A Think Time : N.A Minimum Instruction Time : 0**

**Correct Marks : 5 Wrong Marks : 1**

**Question Key Details :**

Key	Value
Comprehension	MCQ

ਸ਼ੁੱਧ ਕਾਰਜਸ਼ੀਲ ਪੂੰਜੀ ਨੂੰ ਹੇਠ ਲਿਖੇ ਤਰੀਕੇ ਨਾਲ ਨਿਰਧਾਰਿਤ ਕੀਤਾ ਜਾ ਸਕਦਾ ਹੈ?

- A. ਚਾਲੂ-ਸੰਪਤੀ
- B. ਸਥਿਰ / ਅਚਲ ਸੰਪਤੀ
- C. ਚਾਲੂ ਦੇਣਦਾਰੀਆਂ
- D. ਅਚਲਨ / ਲੰਮੇ ਸਮੇ ਦੀ ਦੇਣਦਾਰੀ
- E. ਅੰਸ਼ਧਾਰਕਾਂ ਦੇ ਫੰਡ

ਹੇਠਾਂ ਦਿੱਤੇ ਵਿਕਲਪਾਂ ਵਿੱਚੋਂ ਸਹੀ ਉੱਤਰ ਚੁਣੋ:

- 1. ਸਿਰਫ਼ A
- 2. ਸਿਰਫ਼ A
- 3. ਸਿਰਫ਼ A ਅਤੇ C
- 4. ਸਿਰਫ਼ D ਅਤੇ E

**Options :**

- 485584133969. 1
- 485584133970. 2
- 485584133971. 3
- 485584133972. 4

**Question Number : 79 Question Id : 48558433494 Question Type : MCQ Option Shuffling : No Is Question Mandatory : No Calculator : None Response Time : N.A Think Time : N.A Minimum Instruction Time : 0**

**Correct Marks : 5 Wrong Marks : 1**

**Question Key Details :**

Key	Value
Comprehension	MCQ

Calculate ROI (Return on Investment); where you spend ₹2,00,000/- to open a restaurant and make a profit of ₹40,000/- in one year

- 1. 10%
- 2. 20%
- 3. 50%
- 4. 25%

**Options :**

- 485584133973. 1
- 485584133974. 2
- 485584133975. 3
- 485584133976. 4

**Question Number : 79 Question Id : 48558433494 Question Type : MCQ Option Shuffling : No Is Question Mandatory : No Calculator : None Response Time : N.A Think Time : N.A Minimum Instruction Time : 0**

**Correct Marks : 5 Wrong Marks : 1**

**Question Key Details :**

Key	Value
-----	-------

ROI ਨਿਵੇਸ਼ ਦੀ ਆਮਦਨ ਪਤਾ ਕਰੋ, ਜਿੱਥੇ ਤੁਸੀਂ ₹2,00,000/- ਇੱਕ ਰੇਸ਼ਰਾ ਨੂੰ ਖੋਲਣ ਦਾ ਨਿਵੇਸ਼ ਕੀਤੇ ਅਤੇ ₹40,000/- ਇੱਕ ਸਾਲ ਵਿੱਚ ਕਮਾਇਆ

1. 10%
2. 20%
3. 50%
4. 25%

**Options :**

485584133973. 1  
 485584133974. 2  
 485584133975. 3  
 485584133976. 4

**Question Number : 80 Question Id : 48558433495 Question Type : MCQ Option Shuffling : No Is Question Mandatory : No Calculator : None Response Time : N.A Think Time : N.A Minimum Instruction Time : 0**

**Correct Marks : 5 Wrong Marks : 1**

**Question Key Details :**

Key	Value
Comprehension	MCQ

Effective Inventory Control System aims at

- A. Providing stock as and when the need arises
- B. Procuring stock at minimum possible price
- C. Minimizing cost
- D. Minimizing investment in inventory
- E. Minimizing Control

Choose the correct answer from the options given below:

1. A and D only
2. B and D only
3. A and B only
4. D and E only

**Options :**

485584133977. 1  
 485584133978. 2  
 485584133979. 3  
 485584133980. 4

**Question Number : 80 Question Id : 48558433495 Question Type : MCQ Option Shuffling : No Is Question Mandatory : No Calculator : None Response Time : N.A Think Time : N.A Minimum Instruction Time : 0**

**Correct Marks : 5 Wrong Marks : 1**

**Question Key Details :**

Key	Value
-----	-------

ਪ੍ਰਭਾਵਸ਼ਾਲੀ ਮਾਲ ਨਿਯੰਤਰਨ ਪ੍ਰਣਾਲੀ ਦਾ ਉਦੇਸ਼ ?

- ਸਮਾਨ ਦੀ ਲੋੜ ਪੈਣ ਤੇ ਪੂਰਤੀ
- ਘੱਟੋ-ਘੱਟ ਲਾਗਤ ਤੇ ਸਟਾੱਕ ਦੀ ਖ਼ਰੀਦ
- ਲਾਗਤ ਨੂੰ ਘਟਾਉਣਾ
- ਸਮਾਨ ਵਿੱਚ ਨਿਵੇਸ਼ ਨੂੰ ਘਟਾਉਣਾ
- ਨਿਯੰਤਰਣ ਨੂੰ ਘਟਾਉਣਾ

ਹੇਠਾਂ ਦਿੱਤੇ ਵਿਕਲਪਾਂ ਵਿੱਚੋਂ ਸਹੀ ਉੱਤਰ ਚੁਣੋ:

- ਸਿਰਫ਼ A, D
- ਸਿਰਫ਼ B, D
- ਸਿਰਫ਼ A, B
- ਸਿਰਫ਼ D, E

**Options :**

485584133977. 1  
485584133978. 2  
485584133979. 3  
485584133980. 4

**Question Number : 81 Question Id : 48558433496 Question Type : MCQ Option Shuffling : No Is Question Mandatory : No Calculator : None Response Time : N.A Think Time : N.A Minimum Instruction Time : 0**

**Correct Marks : 5 Wrong Marks : 1**

**Question Key Details :**

Key	Value
Comprehension	MCQ

A seller sells 30000 units of a product per year, demand is uniform. Purchase cost is Rs. 6/- per product. Holding cost per annum is 20% of purchase cost. Ordering cost is Rs.500/- per order. What would be the Economic Order Quantity?

- 5000 units
- 5500 units
- 5200 units
- 4800 units

**Options :**

485584133981. 1  
485584133982. 2  
485584133983. 3  
485584133984. 4

**Question Number : 81 Question Id : 48558433496 Question Type : MCQ Option Shuffling : No Is Question Mandatory : No Calculator : None Response Time : N.A Think Time : N.A Minimum Instruction Time : 0**

**Correct Marks : 5 Wrong Marks : 1**

**Question Key Details :**

Key	Value
Comprehension	MCQ

ਇੱਕ ਵਿਕ੍ਰੇਤਾ ਇੱਕ ਵਸਤੂ ਦੇ 30000 ਇਕਾਈਆਂ ਵੇਚਦਾ ਹੈ, ਅਤੇ ਇਸਦੀ ਮੰਗ ਸਮਾਨ ਹੈ। ਖਰੀਦ ਦੀ ਲਾਗਤ Rs. 6/- ਪ੍ਰਤੀ ਵਸਤੂ ਹੈ ਅਤੇ ਰਖ-ਰਖਾਵ ਦੀ ਲਾਗਤ ਖਰੀਦ ਮੁੱਲ ਦਾ 20% ਹੈ। ਆਰਡਰ ਲਾਗਤ Rs.500/-ਪ੍ਰਤੀ ਆਰਡਰ ਹੈ।EOQ ਪਤਾ ਕਰੋ?

1. 5000 ਇਕਾਈਆਂ
2. 5500 ਇਕਾਈਆਂ
3. 5200 ਇਕਾਈਆਂ
4. 4800 ਇਕਾਈਆਂ

**Options :**

485584133981. 1  
485584133982. 2  
485584133983. 3  
485584133984. 4

**Question Number : 82 Question Id : 48558433497 Question Type : MCQ Option Shuffling : No Is Question Mandatory : No Calculator : None Response Time : N.A Think Time : N.A Minimum Instruction Time : 0**

**Correct Marks : 5 Wrong Marks : 1**

**Question Key Details :**

Key	Value
Comprehension	MCQ

Sandeep, Mohit, Rajat and Rakesh are businessmen producing different products. It takes Sandeep 4 months, Mohit 3 months, Rajat 7 months and Rakesh 1 month, to purchase inventory and to sell the finished product in the market to get cash. Who will require maximum working capital?

1. Sandeep
2. Mohit
3. Rajat
4. Rakesh

**Options :**

485584133985. 1  
485584133986. 2  
485584133987. 3  
485584133988. 4

**Question Number : 82 Question Id : 48558433497 Question Type : MCQ Option Shuffling : No Is Question Mandatory : No Calculator : None Response Time : N.A Think Time : N.A Minimum Instruction Time : 0**

**Correct Marks : 5 Wrong Marks : 1**

**Question Key Details :**

Key	Value
Comprehension	MCQ

ਸੰਦੀਪ, ਮੋਹਿਤ, ਰਜਤ ਅਤੇ ਰਾਕੇਸ਼ ਵਪਾਰੀ ਹਨ ਜੋ ਅਲਗ-ਅਲਗ ਵਸਤੂਆਂ ਬਣਾਉਂਦੇ ਹਨ। ਵਸਤੂ ਖਰੀਦਣ ਲਈ ਸੰਦੀਪ ਨੂੰ 4, ਮੋਹਿਤ ਨੂੰ 3, ਰਜਤ ਨੂੰ 7 ਅਤੇ ਰਾਕੇਸ਼ ਨੂੰ 1 ਮਹੀਨਾ ਲੱਗਦਾ ਹੈ ਅਤੇ ਇਸ ਨੂੰ ਬਜਾਰ ਵਿਚ ਵੇਚ ਕੇ ਨਗਦੀ ਮਿਲਣ। ਸਭ ਤੋਂ ਜ਼ਿਆਦਾ ਕਾਰਜਸ਼ੀਲ ਪੁੰਜੀ ਦੀ ਜ਼ਰੂਰਤ ਕਿਸਨੂੰ ਹੈ?

1. ਸੰਦੀਪ
2. ਮੋਹਿਤ
3. ਰਜਤ
4. ਰਾਕੇਸ਼

**Options :**

485584133985. 1  
485584133986. 2  
485584133987. 3  
485584133988. 4

**Question Number : 83 Question Id : 48558433498 Question Type : MCQ Option Shuffling : No Is Question Mandatory : No Calculator : None Response Time : N.A Think Time : N.A Minimum Instruction Time : 0**

**Correct Marks : 5 Wrong Marks : 1**

**Question Key Details :**

Key	Value
Comprehension	MCQ

The role of transferring financial resources from the surplus units to deficit units is referred to as :

1. Rights Issue
2. Angel Investors
3. Capital Markets
4. Financial intermediation

**Options :**

485584133989. 1  
485584133990. 2  
485584133991. 3  
485584133992. 4

**Question Number : 83 Question Id : 48558433498 Question Type : MCQ Option Shuffling : No Is Question Mandatory : No Calculator : None Response Time : N.A Think Time : N.A Minimum Instruction Time : 0**

**Correct Marks : 5 Wrong Marks : 1**

**Question Key Details :**

Key	Value
Comprehension	MCQ

ਵਿੱਤੀ ਸਰੋਤਾਂ ਦਾ ਵਧੀਕ ਖੇਤਰ ਤੋਂ ਅਭਾਵੀ ਖੇਤਰ ਵਿੱਚ ਟਰਾਂਸਫਰ ਕਰਨ ਨੂੰ \_\_\_\_\_ ਕਿਹਾ ਜਾਂਦਾ ਹੈ?

1. ਅਧਿਕਾਰ ਜਾਰੀ ਕਰਨਾ
2. ਏਂਜਲ ਨਿਵੇਸ਼ਕ
3. ਪੂੰਜੀ ਬਜ਼ਾਰ
4. ਵਿੱਤੀ ਵਿਚੋਲਗੀ

**Options :**

485584133989. 1  
485584133990. 2  
485584133991. 3  
485584133992. 4

**Question Number : 84 Question Id : 48558433499 Question Type : MCQ Option Shuffling : No Is Question Mandatory : No Calculator : None Response Time : N.A Think Time : N.A Minimum Instruction Time : 0**

**Correct Marks : 5 Wrong Marks : 1**

**Question Key Details :**

Key	Value
Comprehension	MCQ

The 'new issues' may be issued by old companies and are called \_\_\_\_\_.

1. Public issue
2. Rights issue
3. Further issue
4. Initial issue

**Options :**

485584133993. 1  
485584133994. 2  
485584133995. 3  
485584133996. 4

**Question Number : 84 Question Id : 48558433499 Question Type : MCQ Option Shuffling : No Is Question Mandatory : No Calculator : None Response Time : N.A Think Time : N.A Minimum Instruction Time : 0**

**Correct Marks : 5 Wrong Marks : 1**

**Question Key Details :**

Key	Value
Comprehension	MCQ

ਪੁਰਾਣੀ ਕੰਪਨੀ ਦੁਆਰਾ " ਨਵੀਂ ਜਾਰੀ ਕਰਨਾ " ਨੂੰ \_\_\_\_\_ ਆਖਦੇ ਹਨ ?

1. ਸਾਰਵਜਨਿਕ ਜਾਰੀ ਕਰਨਾ
2. ਅਧਿਕਾਰ ਜਾਰੀ ਕਰਨਾ
3. ਅਗੇ ਲਈ ਜਾਰੀ ਕਰਨਾ
4. ਸ਼ੁਰੂਆਤੀ ਤੌਰ ਤੇ ਜਾਰੀ ਕਰਨਾ

**Options :**

485584133993. 1  
485584133994. 2  
485584133995. 3  
485584133996. 4

**Question Number : 85 Question Id : 48558433500 Question Type : MCQ Option Shuffling : No Is Question Mandatory : No Calculator : None Response Time : N.A Think Time : N.A Minimum Instruction Time : 0**

**Correct Marks : 5 Wrong Marks : 1**

**Question Key Details :**

Key	Value
Comprehension	MCQ

Mahima started a venture where she could provide food from various restaurants to passengers travelling by train. She created an app for the same. She was guided all throughout by her friend & mentor Shalini, who was a successful entrepreneur herself. Shalini had a corpus of funds which she decided to transfer to Mahima for her venture. Mahima preferred to give Shalini a return on her investment. Identify the source of financing for Mahima.

1. Venture Capital
2. Angel Investor
3. Loan
4. Charity

**Options :**

485584133997. 1  
485584133998. 2  
485584133999. 3  
485584134000. 4

**Question Number : 85 Question Id : 48558433500 Question Type : MCQ Option Shuffling : No Is Question Mandatory : No Calculator : None Response Time : N.A Think Time : N.A Minimum Instruction Time : 0**

**Correct Marks : 5 Wrong Marks : 1**

**Question Key Details :**

Key	Value
Comprehension	MCQ



ਮਹਿਮਾ ਨੇ ਇੱਕ ਵੈੱਚਰ ਸ਼ੁਰੂ ਕੀਤਾ ਜਿਸ ਵਿੱਚ ਉਹ ਖਾਣੇ ਨੂੰ ਰੇਸਤਰਾਂ ਤੋਂ ਟਰੇਨ ਵਿੱਚ ਬੈਠੇ ਮੁਸਾਫਰਾਂ ਤੱਕ ਉਪਲੱਬਧ ਕਰਵਾਵੇਗੀ। ਇਸ ਕਾਰਜ ਲਈ ਉਸਨੇ ਇੱਕ ਐਪ ਵੀ ਬਣਾਈ। ਇਸ ਪੱਖੋਂ ਉਸਨੇ ਆਪਣੀ ਨਿਰਦੇਸ਼ਕ ਅਤੇ ਸਹੇਲੀ ਸ਼ਾਲਿਨੀ ਤੋਂ ਮਦਦ ਮੰਗੀ, ਜੋ ਖੁਦ ਇੱਕ ਸਫਲ ਉਦਯੋਗਪਤੀ ਹੈ। ਸ਼ਾਲਿਨੀ ਦੇ ਕੋਲ ਇੱਕਠੇ ਕੀਤੇ ਗਏ ਕੁਝ ਪੈਸੇ ਹਨ ਜਿਸਨੂੰ ਉਹ ਮਹਿਮਾ ਦੇ ਵੈੱਚਰ ਵਿੱਚ ਨਿਵੇਸ਼ ਕਰਨਾ ਚਾਹੁੰਦੀ ਹੈ। ਮਹਿਮਾ ਨੇ ਸ਼ਾਲਿਨੀ ਨੂੰ ਉਸਦੀ ਨਿਵੇਸ਼ ਮੁੱਲ ਤੇ ਵਾਪਸੀ ਦੇਣ ਦੀ ਪ੍ਰਾਥਮਿਕਤਾ ਕੀਤੀ। ਵਿੱਤੀਕਰਣ ਦਾ ਸਰੋਤ ਦੱਸੋ?

1. ਵੈੱਚਰ ਪੁੰਜੀ
2. ਏਂਜਲ ਨਿਵੇਸ਼ਕ
3. ਕਰਜ਼
4. ਦਾਨ

**Options :**

- 485584133997. 1
- 485584133998. 2
- 485584133999. 3
- 485584134000. 4

**Question Number : 86 Question Id : 48558433501 Question Type : MCQ Option Shuffling : No Is Question Mandatory : No Calculator : None Response Time : N.A Think Time : N.A Minimum Instruction Time : 0**

**Correct Marks : 5 Wrong Marks : 1**

**Question Key Details :**

Key	Value
Comprehension	MCQ

\_\_\_\_\_ is a type of private equity capital provided as seed funding to early stage, high potential, high risk growth up companies/entrepreneurs.

1. Angel investor
2. Venture Capital
3. Working Capital
4. Fixed Capital

**Options :**

- 485584134001. 1
- 485584134002. 2
- 485584134003. 3
- 485584134004. 4

**Question Number : 86 Question Id : 48558433501 Question Type : MCQ Option Shuffling : No Is Question Mandatory : No Calculator : None Response Time : N.A Think Time : N.A Minimum Instruction Time : 0**

**Correct Marks : 5 Wrong Marks : 1**

**Question Key Details :**

Key	Value
Comprehension	MCQ

ਇੱਕ ਤਰੀਕੇ ਦੀ ਨਿਜੀ ਪੂੰਜੀ ਅੰਸ਼ ਹੈ ਜੋ ਸੀਡ-ਫੰਡਿੰਗ ਦੇ ਤੌਰ ਤੇ ਮੁਢਲੇ ਚਰਨ, ਉੱਚੀ ਸਮਰਥਤਾ ਅਤੇ ਉੱਚੇ ਜੋਖਮ ਵਾਲੀ ਕੰਪਨੀਆਂ ਨੂੰ ਦਿੱਤੀ ਜਾਂਦੀ ਹੈ?

1. ਏਂਜਲ ਨਿਵੇਸ਼ਕ
2. ਵੈਂਚਰ ਪੂੰਜੀ
3. ਵਰਕਿੰਗ ਪੂੰਜੀ
4. ਪੱਕੀ ਪੂੰਜੀ

**Options :**

485584134001. 1  
 485584134002. 2  
 485584134003. 3  
 485584134004. 4

**Question Number : 87 Question Id : 48558433502 Question Type : MCQ Option Shuffling : No Is Question Mandatory : No Calculator : None Response Time : N.A Think Time : N.A Minimum Instruction Time : 0**

**Correct Marks : 5 Wrong Marks : 1**

**Question Key Details :**

Key	Value
Comprehension	MCQ

Match List I with List II

LIST I		LIST II	
Types of Issues		Characteristics	
A.	Public issue	I.	Inexpensive & no brokerage
B.	Rights issue	II.	Stock options to motivate employees
C.	Private placement	III.	Issue of prospects
D.	Offer to employees	IV.	UTI, LIC, GICI, SLFC

Choose the correct answer from the options given below:

1. A-IV, B-III, C-II, D-I
2. A-III, B-I, C-IV, D-II
3. A-II, B-IV, C-I, D-III
4. A-I, B-III, C-II, D-IV

**Options :**

485584134005. 1  
 485584134006. 2  
 485584134007. 3  
 485584134008. 4

**Question Number : 87 Question Id : 48558433502 Question Type : MCQ Option Shuffling : No Is Question Mandatory : No Calculator : None Response Time : N.A Think Time : N.A Minimum Instruction Time : 0**

**Correct Marks : 5 Wrong Marks : 1**

**Question Key Details :**

Key	Value
Comprehension	MCQ

ਸੂਚੀ I ਦਾ ਸੂਚੀ II ਨਾਲ ਮਿਲਾਣ ਕਰੋ:

ਸੂਚੀ I		ਸੂਚੀ II	
ਜਾਰੀ ਕਰਨ ਦੀਆਂ ਕਿਸਮਾਂ		ਗੁਣ	
A.	ਸਾਰਵਜਨਿਕ ਜਾਰੀ ਕਰਨਾ	I.	ਕਿਫਾਇਤੀ ਅਤੇ ਗੈਰ-ਦਲਾਲੀ
B.	ਅਧਿਕਾਰ ਜਾਰੀ ਕਰਨਾ	II.	ਕਰਮਚਾਰੀਆਂ ਦੇ ਉਤਸ਼ਾਹ ਨੂੰ ਵਧਾਉਣ ਲਈ ਸਟਾੱਕ-ਆਪਸ਼ਨ / ਵਿਕਲਪ
C.	ਨਿਜੀ ਪਲੇਸਮੈਂਟ	III.	ਪ੍ਰੋਸਪੈਕਟਸ ਜਾਰੀ ਕਰਨਾ
D.	ਕਰਮਚਾਰੀਆਂ ਨੂੰ ਪ੍ਰਸਤਾਵ	IV.	ਯੂ. ਟੀ.ਆਈ, ਐਲ.ਆਈ.ਸੀ, ਜੀ.ਆਈ.ਸੀ.ਆਈ, ਐਸ.ਐਲ.ਐਫ.ਸੀ.

ਹੇਠਾਂ ਦਿੱਤੇ ਵਿਕਲਪਾਂ ਵਿੱਚੋਂ ਸਹੀ ਉੱਤਰ ਚੁਣੋ:

1. A-IV, B-III, C-II, D-I
2. A-III, B-I, C-IV, D-II
3. A-II, B-IV, C-I, D-III
4. A-I, B-III, C-II, D-IV

**Options :**

485584134005. 1  
485584134006. 2  
485584134007. 3  
485584134008. 4

**Question Number : 88 Question Id : 48558433503 Question Type : MCQ Option Shuffling : No Is Question Mandatory : No Calculator : None Response Time : N.A Think Time : N.A Minimum Instruction Time : 0**

**Correct Marks : 5 Wrong Marks : 1**

**Question Key Details :**

Key	Value
Comprehension	MCQ

Venture capitalist look for an exit from the business in the time frame of typically 3-7 years. Identify the way venture capitalist (VC) exit within the time frame from the business where they are investing?

1. VC's have a continuous involvement in the business so they do not exit.
2. VC's disinvest the holdings either to the promoters or in the market
3. VC's invest in the early stage and exit in the pre-public stage by disinvesting their holdings to the promoters
4. VC's exit after selling the shares in the market

**Options :**

485584134009. 1  
485584134010. 2  
485584134011. 3  
485584134012. 4

**Question Number : 88 Question Id : 48558433503 Question Type : MCQ Option Shuffling : No Is Question Mandatory : No Calculator : None Response Time : N.A Think Time : N.A Minimum Instruction Time : 0**

Correct Marks : 5 Wrong Marks : 1

Question Key Details :

Key	Value
Comprehension	MCQ

ਵੈਚਰ ਪੁੰਜੀਗਤ ਨਿਵੇਸ਼ਕ ਆਮਤੌਰ ਤੇ ਇੱਕ ਵਪਾਰ ਵਿੱਚੋਂ 3-7 ਸਾਲਾਂ ਵਿੱਚ ਨਿਕਾਸ ਕਰ ਲੈਂਦੇ ਹਨ। ਉਸ ਵਿਧੀ ਨੂੰ ਪਛਾਣੋ ਜਿਸ ਵਿੱਚ ਨਿਵੇਸ਼ਕ ਨਿਰਧਾਰਿਤ ਸਮੇਂ ਤੇ ਨਿਕਾਸ ਕਰਦੇ ਹਨ?

1. ਵੀ. ਸੀ. ਦਾ ਵਪਾਰ ਵਿੱਚ ਲਗਾਤਾਰ ਸ਼ਮੂਲੀਅਤ ਹੁੰਦੀ ਹੈ, ਜਿਸ ਕਰਕੇ ਉਹ ਵਪਾਰ ਵਿੱਚੋਂ ਨਿਕਾਸ ਨਹੀਂ ਕਰਦੇ।
2. ਵੀ. ਸੀ. ਆਪਣੇ ਹਿੱਸੇ ਦਾ ਪ੍ਰੋਮੋਟਰ ਜਾਂ ਬਜ਼ਾਰ ਵਿੱਚ ਵਿਨਿਵੇਸ਼ ਕਰਦੇ ਹਨ।
3. ਵੀ. ਸੀ. ਵਪਾਰ ਦੇ ਮੁਢਲੇ ਚਰਨ ਵਿੱਚ ਨਿਵੇਸ਼ ਕਰਦੇ ਹਨ ਅਤੇ ਸਾਰਵਜਨਿਕ ਚਰਨ ਤੋਂ ਪਹਿਲਾਂ ਆਪਣੇ ਹਿੱਸੇ ਨੂੰ ਪ੍ਰੋਮੋਟਰ ਨੂੰ ਵਿਨਿਵੇਸ਼ ਕਰਕੇ ਵੇਚ ਦਿੰਦੇ ਹਨ।
4. ਵੀ. ਸੀ. ਬਜ਼ਾਰ ਵਿੱਚ ਆਪਣੀ ਸਾਰੀ ਹਿੱਸੇਦਾਰੀ ਵੇਚ ਕੇ ਨਿਕਾਸ ਕਰ ਲੈਂਦੇ ਹਨ।

Options :

- 485584134009. 1
- 485584134010. 2
- 485584134011. 3
- 485584134012. 4

Question Number : 89 Question Id : 48558433504 Question Type : MCQ Option Shuffling : No Is Question Mandatory : No Calculator : None Response Time : N.A Think Time : N.A Minimum Instruction Time : 0

Correct Marks : 5 Wrong Marks : 1

Question Key Details :

Key	Value
Comprehension	MCQ

Identify the role played by Amit in the process of Financial Intermediation, if he has money which he does not want to spend

1. Financial Intermediary
2. Surplus Unit
3. Deficit Unit
4. Lender

Options :

- 485584134013. 1
- 485584134014. 2
- 485584134015. 3
- 485584134016. 4

Question Number : 89 Question Id : 48558433504 Question Type : MCQ Option Shuffling : No Is Question Mandatory : No Calculator : None Response Time : N.A Think Time : N.A Minimum Instruction Time : 0

Correct Marks : 5 Wrong Marks : 1

Question Key Details :

Key	Value
Comprehension	MCQ

ਵਿੱਤੀ ਵਿਚੋਲਗੀ ਦੇ ਉਸ ਰੋਲ ਨੂੰ ਪਛਾਣੋ ਜਿਸ ਵਿੱਚ ਅਮਿਤ ਕੋਲ ਪੈਸੇ ਹਨ ਪਰ ਉਹ ਉਸਨੂੰ ਖਰਚਣਾ ਨਹੀਂ ਚਾਹੁੰਦਾ ?

1. ਵਿੱਤੀ ਵਿਚੋਲਗੀ
2. ਵਧੀਕ ਇਕਾਈ
3. ਇਕਾਈ ਅਭਾਵ
4. ਉਧਾਰ ਦੇਣ ਵਾਲਾ

**Options :**

485584134013. 1  
485584134014. 2  
485584134015. 3  
485584134016. 4

**Question Number : 90 Question Id : 48558433505 Question Type : MCQ Option Shuffling : No Is Question Mandatory : No Calculator : None Response Time : N.A Think Time : N.A Minimum Instruction Time : 0**

**Correct Marks : 5 Wrong Marks : 1**

**Question Key Details :**

Key	Value
Comprehension	MCQ

Market facilitating to transfer resources from the savers to the entrepreneurs setting new enterprises is:

1. Primary market
2. Secondary market
3. Money Market
4. Debt Market

**Options :**

485584134017. 1  
485584134018. 2  
485584134019. 3  
485584134020. 4

**Question Number : 90 Question Id : 48558433505 Question Type : MCQ Option Shuffling : No Is Question Mandatory : No Calculator : None Response Time : N.A Think Time : N.A Minimum Instruction Time : 0**

**Correct Marks : 5 Wrong Marks : 1**

**Question Key Details :**

Key	Value
Comprehension	MCQ

ਬਜ਼ਾਰ ਦੁਆਰਾ ਬਚਤਕਰਤਾ ਤੋਂ ਉਦਯੋਗਪਤੀ ਤੱਕ ਸਰੋਤਾਂ ਦੇ ਟਰਾਂਸਫਰ ਨੂੰ \_\_\_\_\_ ਬਜ਼ਾਰ ਸੰਚਾਲਿਤ ਕਰਦਾ ਹੈ।

1. ਪ੍ਰਾਥਮਿਕ ਬਜ਼ਾਰ
2. ਸੈਕੰਡਰੀ ਬਜ਼ਾਰ
3. ਮੁਦਰਾ ਬਜ਼ਾਰ
4. ਕਰਜ਼ ਬਜ਼ਾਰ

**Options :**

485584134017. 1  
485584134018. 2  
485584134019. 3  
485584134020. 4

**Sub-Section Number :** 2  
**Sub-Section Id :** 4855842423  
**Question Shuffling Allowed :** No  
**Is Section Default? :** null

**Question Number : 91 Question Id : 48558433506 Question Type : MCQ Option Shuffling : No Is Question Mandatory : No Calculator : None Response Time : N.A Think Time : N.A Minimum Instruction Time : 0**

**Correct Marks : 5 Wrong Marks : 1**

**Question Key Details :**

Key	Value
Comprehension	Comp1

**Case Study (41-45):**

Vibha had created a unique all weather jackets which had solar panels embedded in it. The USP of the jacket was that, harnessing the solar energy it could keep the jacket warm like a heater and cold like an air conditioner depending on the weather. Her market was the youth who came out of the comfort of their homes to stay in hostels. The name of her product was 'TURN COAT' which was beautifully written in comic sans font outside her showroom in FLD Mall. The name had a rising sun next to it making it an attractive composition to look at. Vibha was reading a lot of literature on the promotion strategies that she could use. She had already fixed a public appearance by the superstar Ralia Kapoor at her showroom in 15 days. She opened up Instagram and Twitter accounts in the name of 'TURN COAT'. She got the name of the product and the symbol of the rising sun printed on the parking ticket, that were collected by customers coming to the mall. While deciding on the pricing she was suggested by her mentor to keep the price very high to recover her R & D costs spent on developing the product. She was a little hesitant to do so and decided to price TURN COAT by covering the cost of producing it plus with reasonable profits

The name of Vibha's product 'TURN COAT' written in Comic sans font and the rising sun next to the name is:

1. Brand Mark
2. Logo
3. Brand Name
4. Trade Mark

**Options :**

485584134021. 1  
485584134022. 2  
485584134023. 3  
485584134024. 4

**Question Number : 91 Question Id : 48558433506 Question Type : MCQ Option Shuffling : No Is Question Mandatory : No Calculator : None Response Time : N.A Think Time : N.A Minimum Instruction Time : 0**

**Correct Marks : 5 Wrong Marks : 1**

**Question Key Details :**

Key	Value
Comprehension	Comp1

ਵਿਭਾ ਨੇ ਇੱਕ ਹਰ ਮੌਸਮੀ ਜੈਕਟ ਬਣਾਇਆ ਹੈ ਜਿਸ ਵਿੱਚ ਸੋਲਰ ਪੈਨਲ ਲਗੇ ਹੋਏ ਹਨ ਇਸਦੇ USP ਦਾ ਕਾਰਜ, ਸੋਲਰ ਊਰਜਾ ਦੀ ਵਰਤੋਂ ਕਰਕੇ ਇੱਕ ਹੀਟਰ ਦੇ ਵਾਂਗ ਸਰਦੀਆਂ ਵਿੱਚ ਜੈਕਟ ਨੂੰ ਗਰਮ ਰਖਣਾ ਅਤੇ ਗਰਮੀਆਂ ਵਿੱਚ ਜੈਕਟ ਨੂੰ ਇੱਕ ਏਅਰ ਕੰਡੀਸ਼ਨਰ ਵਾਂਗ ਠੰਡਾ ਰਖਣਾ ਹੈ। ਉਸਦੇ ਉਦੇਸ਼ਿਤ ਖਪਤਕਾਰ ਉਹ ਯੁਵਕ ਸਨ ਜੋ ਆਪਣੇ ਘਰਾਂ ਤੋਂ ਬਾਹਰ ਹੋਸਟਲ ਵਿੱਚ ਰਹਿਣ ਆਏ ਸਨ। ਉਹਨਾਂ ਨੇ ਆਪਣੇ ਉਤਪਾਦਨ ਦਾ ਨਾਂ " ਟਰਨ ਕੋਟ " ਰਖਿਆ ਜੋ ਕਿ ਇੱਕ ਸੁੰਦਰ ਲਿਪੀ ਵਿੱਚ ਲਿਖ ਕੇ FLD ਮਾਲ ਦੇ ਬਾਹਰ ਲਗਾਇਆ। ਨਾਂ ਦੇ ਨਾਲ ਇੱਕ ਚੜ੍ਹਦੇ ਸੂਰਜ ਦੀ ਤਸਵੀਰ ਹੈ ਜੋ ਬਹੁਤ ਹੀ ਲੁਭਾਵਨੀ ਲੱਗ ਰਹੀ ਸੀ ਵਿਭਾ ਇਸ ਉਤਪਾਦਨ ਦੇ ਸੰਬੰਧਤ ਬਹੁਤ ਸਾਰੇ ਅਤੇ ਪ੍ਰਚਾਰਕ ਵਿਚਾਰ ਬਾਰੇ ਪੜ੍ਹ ਰਹੀ ਸੀ ਉਸਨੇ 15 ਦਿਨਾਂ ਦੇ ਅੰਦਰ ਸੁਪਰਸਟਾਰ ਗਲਿਆਕਪੂਰ ਨੂੰ ਮਾਲ ਵਿੱਚ ਬੁਲਾਉਣ ਲਈ ਵੀ ਸਦਾ ਦੇ ਦਿੱਤਾ ਸੀ। ਉਸਨੇ ਟਵਿਟਰ ਅਤੇ ਇੰਸਟਾਗ੍ਰਾਮ ਉੱਤੇ ਟਰਨ ਕੋਟ ਨਾਮਕ ਅਕਾਊਂਟ ਵੀ ਬਣਾ ਲਿਆ। ਚੜ੍ਹਦੇ ਸੂਰਜ ਦੀ ਤਸਵੀਰਾਂ ਦੀਆਂ ਟਿਕਟਾ ਬਣਾ ਕੇ ਮਾਲ ਵਿੱਚ ਆਉਣ ਵਾਲੇ ਗਾਹਕਾਂ ਨੂੰ ਦੇਣ ਲਗ ਗਏ। ਜਦੋਂ ਕੀਮਤਾਂ ਨਿਰਧਾਰਣ ਕਰਨ ਦਾ ਸਮਾਂ ਆਇਆ ਤਾਂ ਉਹਨਾਂ ਨੂੰ ਆਪਣੇ ਮਾਹਰ ਤੋਂ ਕੀਮਤਾਂ ਨੂੰ ਬਹੁਤ ਉੱਚਾ ਰਖਣ ਦਾ ਸੁਝਾਅ ਮਿਲਿਆ ਤਾਂ ਜੋ ਖੋਜ ਅਤੇ ਵਿਕਾਸ ਲਾਗਤ ਨੂੰ ਜਲਦੀ ਤੋਂ ਜਲਦੀ ਵਸੂਲਿਆ ਜਾ ਸਕੇ। ਵਿਭਾ ਇਸ ਸੰਬੰਧੀ ਥੋੜੀ ਝਿੜਕ ਰਹੀ ਸੀ ਪਰ ਉਸਨੇ " ਟਰਨ ਕੋਟ " ਦੀ ਕੀਮਤ ਉਤਪਾਦਨ ਲਾਗਤ ਜਮਾ ਇੱਕ ਆਮ / ਜਾਇਜ਼ ਲਾਭ ਤੇ ਨਿਰਧਾਰਿਤ ਕਰਨ ਦਾ ਫੈਸਲਾ ਕੀਤਾ

ਵਿਭਾ ਦੁਆਰਾ ਉਤਪਾਦਿਤ ਵਸਤੂ " ਟਰਨ ਕੋਟ " ਜਿਸ ਵਿੱਚ ਕਾਸਿਕ ਸੈਨ ਲਿਪੀ ਅਤੇ ਉਗਦੇ ( ਚੜ੍ਹਦੇ ) ਸੂਰਜ ਨੂੰ ਦਰਸਾਇਆ ਗਿਆ ਹੈ?

1. ਬਰਾਂਡ ਮਾਰਕ
2. ਲੋਗੋ
3. ਬਰਾਂਡ ਦਾ ਨਾਂ
4. ਵਪਾਰਕ ਚਿੰਨ੍ਹ

**Options :**

485584134021. 1  
485584134022. 2  
485584134023. 3  
485584134024. 4

**Question Number : 92 Question Id : 48558433507 Question Type : MCQ Option Shuffling : No Is Question Mandatory : No Calculator : None Response Time : N.A Think Time : N.A Minimum Instruction Time : 0**

**Correct Marks : 5 Wrong Marks : 1**

**Question Key Details :**

Key	Value
Comprehension	Comp1

### Case Study (41-45):

Vibha had created a unique all weather jackets which had solar panels embedded in it. The USP of the jacket was that, harnessing the solar energy it could keep the jacket warm like a heater and cold like an air conditioner depending on the weather. Her market was the youth who came out of the comfort of their homes to stay in hostels. The name of her product was 'TURN COAT' which was beautifully written in comic sans font outside her showroom in FLD Mall. The name had a rising sun next to it making it an attractive composition to look at. Vibha was reading a lot of literature on the promotion strategies that she could use. She had already fixed a public appearance by the superstar Ralia Kapoor at her showroom in 15 days. She opened up Instagram and Twitter accounts in the name of 'TURN COAT'. She got the name of the product and the symbol of the rising sun printed on the parking ticket, that were collected by customers coming to the mall. While deciding on the pricing she was suggested by her mentor to keep the price very high to recover her R & D costs spent on developing the product. She was a little hesitant to do so and decided to price TURN COAT by covering the cost of producing it plus with reasonable profits

The celebrity appearance of Ralia Kapoor at Vibha's showroom can be categorized as a part of:

1. Advertising
2. Public relations
3. Product placement
4. Sales promotion

#### Options :

485584134025. 1  
485584134026. 2  
485584134027. 3  
485584134028. 4

**Question Number : 92 Question Id : 48558433507 Question Type : MCQ Option Shuffling : No Is Question Mandatory : No Calculator : None Response Time : N.A Think Time : N.A Minimum Instruction Time : 0**

**Correct Marks : 5 Wrong Marks : 1**

#### Question Key Details :

Key	Value
Comprehension	Comp1

ਵਿਭਾ ਨੇ ਇੱਕ ਹਰ ਮੌਸਮੀ ਜੈਕਟ ਬਣਾਇਆ ਹੈ ਜਿਸ ਵਿੱਚ ਸੋਲਰ ਪੈਨਲ ਲਗੇ ਹੋਏ ਹਨ ਇਸਦੇ USP ਦਾ ਕਾਰਜ, ਸੋਲਰ ਊਰਜਾ ਦੀ ਵਰਤੋਂ ਕਰਕੇ ਇੱਕ ਹੀਟਰ ਦੇ ਵਾਂਗ ਸਰਦੀਆਂ ਵਿੱਚ ਜੈਕਟ ਨੂੰ ਗਰਮ ਰਖਣਾ ਅਤੇ ਗਰਮੀਆਂ ਵਿੱਚ ਜੈਕਟ ਨੂੰ ਇੱਕ ਏਅਰ ਕੰਡੀਸ਼ਨਰ ਵਾਂਗ ਠੰਡਾ ਰਖਣਾ ਹੈ। ਉਸਦੇ ਉਦੇਸ਼ਿਤ ਖਪਤਕਾਰ ਉਹ ਯੁਵਕ ਸਨ ਜੋ ਆਪਣੇ ਘਰਾਂ ਤੋਂ ਬਾਹਰ ਹੋਸਟਲ ਵਿੱਚ ਰਹਿਣ ਆਏ ਸਨ। ਉਹਨਾਂ ਨੇ ਆਪਣੇ ਉਤਪਾਦਨ ਦਾ ਨਾਂ " ਟਰਨ ਕੋਟ " ਰਖਿਆ ਜੋ ਕਿ ਇੱਕ ਸੁੰਦਰ ਲਿਪੀ ਵਿੱਚ ਲਿਖ ਕੇ FLD ਮਾਲ ਦੇ ਬਾਹਰ ਲਗਾਇਆ। ਨਾਂ ਦੇ ਨਾਲ ਇੱਕ ਚੜਦੇ ਸੂਰਜ ਦੀ ਤਸਵੀਰ ਹੈ ਜੋ ਬਹੁਤ ਹੀ ਲੁਭਾਵਨੀ ਲੱਗ ਰਹੀ ਸੀ ਵਿਭਾ ਇਸ ਉਤਪਾਦਨ ਦੇ ਸੰਬੰਧਤ ਬਹੁਤ ਸਾਰੇ ਅਤੇ ਪ੍ਰਚਾਰਕ ਵਿਚਾਰ ਬਾਰੇ ਪੜ੍ਹ ਰਹੀ ਸੀ ਉਸਨੇ 15 ਦਿਨਾਂ ਦੇ ਅੰਦਰ ਸੁਪਰਸਟਾਰ ਰਾਲਿਆਕਪੂਰ ਨੂੰ ਮਾਲ ਵਿੱਚ ਬੁਲਾਉਣ ਲਈ ਵੀ ਸਦਾ ਦੇ ਦਿੱਤਾ ਸੀ। ਉਸਨੇ ਟਵਿਟਰ ਅਤੇ ਇੰਸਟਾਗ੍ਰਾਮ ਉੱਤੇ ਟਰਨ ਕੋਟ ਨਾਮਕ ਅਕਾਊਂਟ ਵੀ ਬਣਾ ਲਿਆ। ਚੜਦੇ ਸੂਰਜ ਦੀ ਤਸਵੀਰਾਂ ਦੀਆਂ ਟਿਕਟਾ ਬਣਾ ਕੇ ਮਾਲ ਵਿੱਚ ਆਉਣ ਵਾਲੇ ਗਾਹਕਾਂ ਨੂੰ ਦੇਣ ਲਗ ਗਏ। ਜਦੋਂ ਕੀਮਤਾਂ ਨਿਰਧਾਰਣ ਕਰਨ ਦਾ ਸਮਾਂ ਆਇਆ ਤਾਂ ਉਹਨਾਂ ਨੂੰ ਆਪਣੇ ਮਾਹਰ ਤੋਂ ਕੀਮਤਾਂ ਨੂੰ ਬਹੁਤ ਉੱਚਾ ਰਖਣ ਦਾ ਸੁਝਾਅ ਮਿਲਿਆ ਤਾਂ ਜੋ ਖੋਜ ਅਤੇ ਵਿਕਾਸ ਲਾਗਤ ਨੂੰ ਜਲਦੀ ਤੋਂ ਜਲਦੀ ਵਸੂਲਿਆ ਜਾ ਸਕੇ। ਵਿਭਾ ਇਸ ਸੰਬੰਧੀ ਥੋੜੀ ਝਿੜਕ ਰਹੀ ਸੀ ਪਰ ਉਸਨੇ " ਟਰਨ ਕੋਟ " ਦੀ ਕੀਮਤ ਉਤਪਾਦਨ ਲਾਗਤ ਜਮਾ ਇੱਕ ਆਮ / ਜਾਇਜ਼ ਲਾਭ ਤੇ ਨਿਰਧਾਰਿਤ ਕਰਨ ਦਾ ਫੈਸਲਾ ਕੀਤਾ



ਅਦਾਕਾਰਾ " ਰਾਲਿਆ ਕਪੂਰ " ਦੀ ਵਿਭਾ ਦੇ ਸ਼ੋ-ਰੂਮ ਵਿੱਚ ਸੇਲਿਬਿਟੀ ਅਪੀਅਰੈਂਸ ਨੂੰ ਕੀ ਕਿਹਾ ਜਾਵੇਗਾ ?

1. ਮਸ਼ਹੂਰੀ
2. ਸਮਾਜਿਕ ਸੰਬੰਧ
3. ਵਸਤੂ ਪਲੇਸਮੈਂਟ
4. ਵਿਕਰੀ ਪ੍ਰਚਾਰ

**Options :**

485584134025. 1  
485584134026. 2  
485584134027. 3  
485584134028. 4

**Question Number : 93 Question Id : 48558433508 Question Type : MCQ Option Shuffling : No Is Question Mandatory : No Calculator : None Response Time : N.A Think Time : N.A Minimum Instruction Time : 0**

**Correct Marks : 5 Wrong Marks : 1**

**Question Key Details :**

Key	Value
Comprehension	Comp1

**Case Study (41-45):**

Vibha had created a unique all weather jackets which had solar panels embedded in it. The USP of the jacket was that, harnessing the solar energy it could keep the jacket warm like a heater and cold like an air conditioner depending on the weather. Her market was the youth who came out of the comfort of their homes to stay in hostels. The name of her product was 'TURN COAT' which was beautifully written in comic sans font outside her showroom in FLD Mall. The name had a rising sun next to it making it an attractive composition to look at. Vibha was reading a lot of literature on the promotion strategies that she could use. She had already fixed a public appearance by the superstar Ralia Kapoor at her showroom in 15 days. She opened up Instagram and Twitter accounts in the name of 'TURN COAT'. She got the name of the product and the symbol of the rising sun printed on the parking ticket, that were collected by customers coming to the mall. While deciding on the pricing she was suggested by her mentor to keep the price very high to recover her R & D costs spent on developing the product. She was a little hesitant to do so and decided to price TURN COAT by covering the cost of producing it plus with reasonable profits

The pricing technique that was suggested to Vibha and the one that she finally used can be identified as-

- A. Variable pricing
- B. Penetration pricing
- C. Skimming pricing
- D. Fixed cost pricing
- E. Cost-plus pricing

Choose the correct answer from the options given below:

- 1. C & E only
- 2. A & B only
- 3. B & D only
- 4. C & D only

**Options :**

- 485584134029. 1
- 485584134030. 2
- 485584134031. 3
- 485584134032. 4

**Question Number : 93 Question Id : 48558433508 Question Type : MCQ Option Shuffling : No Is Question Mandatory : No Calculator : None Response Time : N.A Think Time : N.A Minimum Instruction Time : 0**

**Correct Marks : 5 Wrong Marks : 1**

**Question Key Details :**

Key	Value
Comprehension	Comp1

ਵਿਭਾ ਨੇ ਇੱਕ ਹਰ ਮੌਸਮੀ ਜੈਕਟ ਬਣਾਇਆ ਹੈ ਜਿਸ ਵਿੱਚ ਸੋਲਰ ਪੈਨਲ ਲਗੇ ਹੋਏ ਹਨ ਇਸਦੇ USP ਦਾ ਕਾਰਜ, ਸੋਲਰ ਊਰਜਾ ਦੀ ਵਰਤੋਂ ਕਰਕੇ ਇੱਕ ਗੀਟਰ ਦੇ ਵਾਂਗ ਸਰਦੀਆਂ ਵਿੱਚ ਜੈਕਟ ਨੂੰ ਗਰਮ ਰਖਣਾ ਅਤੇ ਗਰਮੀਆਂ ਵਿੱਚ ਜੈਕਟ ਨੂੰ ਇੱਕ ਏਅਰ ਕੰਡੀਸ਼ਨਰ ਵਾਂਗ ਠੰਡਾ ਰਖਣਾ ਹੈ। ਉਸਦੇ ਉਦੇਸ਼ਿਤ ਖਪਤਕਾਰ ਉਹ ਯੁਵਕ ਸਨ ਜੋ ਆਪਣੇ ਘਰਾਂ ਤੋਂ ਬਾਹਰ ਹੋਸਟਲ ਵਿੱਚ ਰਹਿਣ ਆਏ ਸਨ। ਉਹਨਾਂ ਨੇ ਆਪਣੇ ਉਤਪਾਦਨ ਦਾ ਨਾਂ " ਟਰਨ ਕੋਟ " ਰਖਿਆ ਜੋ ਕਿ ਇੱਕ ਸੁੰਦਰ ਲਿਪੀ ਵਿੱਚ ਲਿਖ ਕੇ FLD ਮਾਲ ਦੇ ਬਾਹਰ ਲਗਾਇਆ। ਨਾਂ ਦੇ ਨਾਲ ਇੱਕ ਚੜਦੇ ਸੂਰਜ ਦੀ ਤਸਵੀਰ ਹੈ ਜੋ ਬਹੁਤ ਹੀ ਲੁਭਾਵਨੀ ਲੱਗ ਰਹੀ ਸੀ ਵਿਭਾ ਇਸ ਉਤਪਾਦਨ ਦੇ ਸੰਬੰਧਤ ਬਹੁਤ ਸਾਰੇ ਅਤੇ ਪ੍ਰਚਾਰਕ ਵਿਚਾਰ ਬਾਰੇ ਪੜ੍ਹ ਰਹੀ ਸੀ ਉਸਨੇ 15 ਦਿਨਾਂ ਦੇ ਅੰਦਰ ਸੁਪਰਸਟਾਰ ਗਲਿਆਕਪੂਰ ਨੂੰ ਮਾਲ ਵਿੱਚ ਬੁਲਾਉਣ ਲਈ ਵੀ ਸਦਾ ਦੇ ਦਿੱਤਾ ਸੀ। ਉਸਨੇ ਟਵਿਟਰ ਅਤੇ ਇੰਸਟਾਗ੍ਰਾਮ ਉੱਤੇ ਟਰਨ ਕੋਟ ਨਾਮਕ ਅਕਾਊਂਟ ਵੀ ਬਣਾ ਲਿਆ। ਚੜ੍ਹਦੇ ਸੂਰਜ ਦੀ ਤਸਵੀਰਾਂ ਦੀਆਂ ਟਿਕਟਾ ਬਣਾ ਕੇ ਮਾਲ ਵਿੱਚ ਆਉਣ ਵਾਲੇ ਗਾਹਕਾਂ ਨੂੰ ਦੇਣ ਲਗ ਗਏ। ਜਦੋਂ ਕੀਮਤਾਂ ਨਿਰਧਾਰਣ ਕਰਨ ਦਾ ਸਮਾਂ ਆਇਆ ਤਾਂ ਉਹਨਾਂ ਨੂੰ ਆਪਣੇ ਮਾਹਰ ਤੋਂ ਕੀਮਤਾਂ ਨੂੰ ਬਹੁਤ ਉੱਚਾ ਰਖਣ ਦਾ ਸੁਝਾਅ ਮਿਲਿਆ ਤਾਂ ਜੋ ਖੋਜ ਅਤੇ ਵਿਕਾਸ ਲਾਗਤ ਨੂੰ ਜਲਦੀ ਤੋਂ ਜਲਦੀ ਵਸੂਲਿਆ ਜਾ ਸਕੇ। ਵਿਭਾ ਇਸ ਸੰਬੰਧੀ ਥੋੜੀ ਝਿੜਕ ਰਹੀ ਸੀ ਪਰ ਉਸਨੇ " ਟਰਨ ਕੋਟ " ਦੀ ਕੀਮਤ ਉਤਪਾਦਨ ਲਾਗਤ ਜਮਾ ਇੱਕ ਆਮ / ਜਾਇਜ਼ ਲਾਭ ਤੇ ਨਿਰਧਾਰਿਤ ਕਰਨ ਦਾ ਫੈਸਲਾ ਕੀਤਾ

ਕੀਮਤ ਦੀ ਤਕਨੀਕ ਜਿਸਨੂੰ ਵਿਭਾ ਨੂੰ ਸਲਾਹਿਤ ਕੀਤਾ ਗਿਆ ਸੀ ਅਤੇ ਉਸਨੇ ਅੰਤ ਵਿੱਚ ਇਸਤੇਮਾਲ ਕੀਤੀ। ਉਸਨੂੰ \_\_\_\_\_ ਕਿਹਾ ਜਾਂਦਾ ਹੈ?

- A. ਚਰ ਕੀਮਤ
- B. ਦਾਖਿਲੇ ਦੀ ਕੀਮਤ
- C. ਸਕਿਮਿੰਗ ਦੀ ਕੀਮਤ
- D. ਸਥਿਰ ਲਾਗਤ ਦੀ ਕੀਮਤ
- E. ਲਾਗਤ ਜਮਾਂ ਕੀਮਤ

ਹੇਠਾਂ ਦਿੱਤੇ ਵਿਕਲਪਾਂ ਵਿੱਚੋਂ ਸਹੀ ਉੱਤਰ ਚੁਣੋ:

1. ਸਿਰਫ਼ C ਅਤੇ E
2. ਸਿਰਫ਼ A ਅਤੇ B
3. ਸਿਰਫ਼ B ਅਤੇ D
4. ਸਿਰਫ਼ C ਅਤੇ D

**Options :**

- 485584134029. 1
- 485584134030. 2
- 485584134031. 3
- 485584134032. 4

**Question Number : 94 Question Id : 48558433509 Question Type : MCQ Option Shuffling : No Is Question Mandatory : No Calculator : None Response Time : N.A Think Time : N.A Minimum Instruction Time : 0**

**Correct Marks : 5 Wrong Marks : 1**

**Question Key Details :**

Key	Value
Comprehension	Comp1

**Case Study (41-45):**

Vibha had created a unique all weather jackets which had solar panels embedded in it. The USP of the jacket was that, harnessing the solar energy it could keep the jacket warm like a heater and cold like an air conditioner depending on the weather. Her market was the youth who came out of the comfort of their homes to stay in hostels. The name of her product was 'TURN COAT' which was beautifully written in comic sans font outside her showroom in FLD Mall. The name had a rising sun next to it making it an attractive composition to look at. Vibha was reading a lot of literature on the promotion strategies that she could use. She had already fixed a public appearance by the superstar Ralia Kapoor at her showroom in 15 days. She opened up Instagram and Twitter accounts in the name of 'TURN COAT'. She got the name of the product and the symbol of the rising sun printed on the parking ticket, that were collected by customers coming to the mall. While deciding on the pricing she was suggested by her mentor to keep the price very high to recover her R & D costs spent on developing the product. She was a little hesitant to do so and decided to price TURN COAT by covering the cost of producing it plus with reasonable profits

The name of the product and the symbol printed on the parking tickets is an example of :

1. Above-the-line approach
2. Public Relations
3. Ambient (Media Mix )
4. Business Promotion (Sales promotion)

**Options :**

485584134033. 1
485584134034. 2
485584134035. 3
485584134036. 4

**Question Number : 94 Question Id : 48558433509 Question Type : MCQ Option Shuffling : No Is Question Mandatory : No Calculator : None Response Time : N.A Think Time : N.A Minimum Instruction Time : 0**

**Correct Marks : 5 Wrong Marks : 1**

**Question Key Details :**

Key	Value
Comprehension	Comp1

ਵਿਭਾ ਨੇ ਇੱਕ ਹਰ ਮੌਸਮੀ ਜੈਕਟ ਬਣਾਇਆ ਹੈ ਜਿਸ ਵਿੱਚ ਸੋਲਰ ਪੈਨਲ ਲਗੇ ਹੋਏ ਹਨ ਇਸਦੇ USP ਦਾ ਕਾਰਜ, ਸੋਲਰ ਊਰਜਾ ਦੀ ਵਰਤੋਂ ਕਰਕੇ ਇੱਕ ਗੀਟਰ ਦੇ ਵਾਂਗ ਸਰਦੀਆਂ ਵਿੱਚ ਜੈਕਟ ਨੂੰ ਗਰਮ ਰਖਣਾ ਅਤੇ ਗਰਮੀਆਂ ਵਿੱਚ ਜੈਕਟ ਨੂੰ ਇੱਕ ਏਅਰ ਕੰਡੀਸ਼ਨਰ ਵਾਂਗ ਠੰਡਾ ਰਖਣਾ ਹੈ। ਉਸਦੇ ਉਦੇਸ਼ਿਤ ਖਪਤਕਾਰ ਉਹ ਯੁਵਕ ਸਨ ਜੋ ਆਪਣੇ ਘਰਾਂ ਤੋਂ ਬਾਹਰ ਹੋਸਟਲ ਵਿੱਚ ਰਹਿਣ ਆਏ ਸਨ। ਉਹਨਾਂ ਨੇ ਆਪਣੇ ਉਤਪਾਦਨ ਦਾ ਨਾਂ " ਟਰਨ ਕੋਟ " ਰਖਿਆ ਜੋ ਕਿ ਇੱਕ ਸੁੰਦਰ ਲਿਪੀ ਵਿੱਚ ਲਿਖ ਕੇ FLD ਮਾਲ ਦੇ ਬਾਹਰ ਲਗਾਇਆ। ਨਾਂ ਦੇ ਨਾਲ ਇੱਕ ਚੜਦੇ ਸੂਰਜ ਦੀ ਤਸਵੀਰ ਹੈ ਜੋ ਬਹੁਤ ਹੀ ਲੁਭਾਵਨੀ ਲੱਗ ਰਹੀ ਸੀ ਵਿਭਾ ਇਸ ਉਤਪਾਦਨ ਦੇ ਸੰਬੰਧਤ ਬਹੁਤ ਸਾਰੇ ਅਤੇ ਪ੍ਰਚਾਰਕ ਵਿਚਾਰ ਬਾਰੇ ਪੜ੍ਹ ਰਹੀ ਸੀ ਉਸਨੇ 15 ਦਿਨਾਂ ਦੇ ਅੰਦਰ ਸੁਪਰਸਟਾਰ ਗਲਿਆਕਪੂਰ ਨੂੰ ਮਾਲ ਵਿੱਚ ਬੁਲਾਉਣ ਲਈ ਵੀ ਸਦਾ ਦੇ ਦਿੱਤਾ ਸੀ। ਉਸਨੇ ਟਵਿਟਰ ਅਤੇ ਇੰਸਟਾਗ੍ਰਾਮ ਉੱਤੇ ਟਰਨ ਕੋਟ ਨਾਮਕ ਅਕਾਊਂਟ ਵੀ ਬਣਾ ਲਿਆ। ਚੜਦੇ ਸੂਰਜ ਦੀ ਤਸਵੀਰਾਂ ਦੀਆਂ ਟਿਕਟਾ ਬਣਾ ਕੇ ਮਾਲ ਵਿੱਚ ਆਉਣ ਵਾਲੇ ਗਾਹਕਾਂ ਨੂੰ ਦੇਣ ਲਗ ਗਏ। ਜਦੋਂ ਕੀਮਤਾਂ ਨਿਰਧਾਰਣ ਕਰਨ ਦਾ ਸਮਾਂ ਆਇਆ ਤਾਂ ਉਹਨਾਂ ਨੂੰ ਆਪਣੇ ਮਾਹਰ ਤੋਂ ਕੀਮਤਾਂ ਨੂੰ ਬਹੁਤ ਉੱਚਾ ਰਖਣ ਦਾ ਸੁਝਾਅ ਮਿਲਿਆ ਤਾਂ ਜੋ ਖੋਜ ਅਤੇ ਵਿਕਾਸ ਲਾਗਤ ਨੂੰ ਜਲਦੀ ਤੋਂ ਜਲਦੀ ਵਸੂਲਿਆ ਜਾ ਸਕੇ। ਵਿਭਾ ਇਸ ਸੰਬੰਧੀ ਥੋੜੀ ਝਿੜਕ ਰਹੀ ਸੀ ਪਰ ਉਸਨੇ " ਟਰਨ ਕੋਟ " ਦੀ ਕੀਮਤ ਉਤਪਾਦਨ ਲਾਗਤ ਜਮਾ ਇੱਕ ਆਮ / ਜਾਇਜ਼ ਲਾਭ ਤੇ ਨਿਰਧਾਰਿਤ ਕਰਨ ਦਾ ਫੈਸਲਾ ਕੀਤਾ

ਵਸਤੂ ਦਾ ਨਾਂ ਅਤੇ ਮੁਦਰਿਤ ਨਿਸ਼ਾਨ ਜੋ ਪਾਰਕਿੰਗ ਟਿਕਟਾ ਉੱਤੇ ਮੋਜੂਦ ਸੀ ਇਹ ਉਦਾਹਰਨ ਹਨ?

1. ਰੇਖਾ ਤੋਂ ਉੱਪਰ ਦੀ ਵਿਧੀ
2. ਸਮਾਜਕ ਸੰਬੰਧ
3. ਮਾਰੋਲ ( ਮੀਡੀਆ ਮਿਕਸ )
4. ਵਪਾਰਕ ਪ੍ਰਚਾਰ ( ਵਿਕਰੀ ਪ੍ਰਚਾਰ )

**Options :**

485584134033. 1
485584134034. 2
485584134035. 3
485584134036. 4

**Question Number : 95 Question Id : 48558433510 Question Type : MCQ Option Shuffling : No Is Question Mandatory : No Calculator : None Response Time : N.A Think Time : N.A Minimum Instruction Time : 0**

Correct Marks : 5 Wrong Marks : 1

Question Key Details :

Key	Value
Comprehension	Comp1

Case Study (41-45):

Vibha had created a unique all weather jackets which had solar panels embedded in it. The USP of the jacket was that, harnessing the solar energy it could keep the jacket warm like a heater and cold like an air conditioner depending on the weather. Her market was the youth who came out of the comfort of their homes to stay in hostels. The name of her product was 'TURN COAT' which was beautifully written in comic sans font outside her showroom in FLD Mall. The name had a rising sun next to it making it an attractive composition to look at. Vibha was reading a lot of literature on the promotion strategies that she could use. She had already fixed a public appearance by the superstar Ralia Kapoor at her showroom in 15 days. She opened up Instagram and Twitter accounts in the name of 'TURN COAT'. She got the name of the product and the symbol of the rising sun printed on the parking ticket, that were collected by customers coming to the mall. While deciding on the pricing she was suggested by her mentor to keep the price very high to recover her R & D costs spent on developing the product. She was a little hesitant to do so and decided to price TURN COAT by covering the cost of producing it plus with reasonable profits

Promoting her product on instagram and twitter accounts would fall under:

1. Above the line approach
2. Below the line approach
3. Through the line approach
4. Indirect sales strategy approach

Options :

485584134037. 1

485584134038. 2

485584134039. 3

485584134040. 4

Question Number : 95 Question Id : 48558433510 Question Type : MCQ Option Shuffling : No Is Question Mandatory : No Calculator : None Response Time : N.A Think Time : N.A Minimum Instruction Time : 0

Correct Marks : 5 Wrong Marks : 1

Question Key Details :

Key	Value
Comprehension	Comp1

ਵਿਭਾ ਨੇ ਇੱਕ ਹਰ ਮੌਸਮੀ ਜੈਕਟ ਬਣਾਇਆ ਹੈ ਜਿਸ ਵਿੱਚ ਸੋਲਰ ਪੈਨਲ ਲਗੇ ਹੋਏ ਹਨ ਇਸਦੇ USP ਦਾ ਕਾਰਜ, ਸੋਲਰ ਊਰਜਾ ਦੀ ਵਰਤੋਂ ਕਰਕੇ ਇੱਕ ਹੀਟਰ ਦੇ ਵਾਂਗ ਸਰਦੀਆਂ ਵਿੱਚ ਜੈਕਟ ਨੂੰ ਗਰਮ ਰਖਣਾ ਅਤੇ ਗਰਮੀਆਂ ਵਿੱਚ ਜੈਕਟ ਨੂੰ ਇੱਕ ਏਅਰ ਕੰਡੀਸ਼ਨਰ ਵਾਂਗ ਠੰਡਾ ਰਖਣਾ ਹੈ। ਉਸਦੇ ਉਦੇਸ਼ਿਤ ਖਪਤਕਾਰ ਉਹ ਯੁਵਕ ਸਨ ਜੋ ਆਪਣੇ ਘਰਾਂ ਤੋਂ ਬਾਹਰ ਹੋਸਟਲ ਵਿੱਚ ਰਹਿਣ ਆਏ ਸਨ। ਉਹਨਾਂ ਨੇ ਆਪਣੇ ਉਤਪਾਦਨ ਦਾ ਨਾਂ " ਟਰਨ ਕੋਟ " ਰਖਿਆ ਜੋ ਕਿ ਇੱਕ ਸੁੰਦਰ ਲਿਪੀ ਵਿੱਚ ਲਿਖ ਕੇ FLD ਮਾਲ ਦੇ ਬਾਹਰ ਲਗਾਇਆ। ਨਾਂ ਦੇ ਨਾਲ ਇੱਕ ਚੜਦੇ ਸੂਰਜ ਦੀ ਤਸਵੀਰ ਹੈ ਜੋ ਬਹੁਤ ਹੀ ਲੁਭਾਵਨੀ ਲੱਗ ਰਹੀ ਸੀ ਵਿਭਾ ਇਸ ਉਤਪਾਦਨ ਦੇ ਸੰਬੰਧਤ ਬਹੁਤ ਸਾਰੇ ਅਤੇ ਪ੍ਰਚਾਰਕ ਵਿਚਾਰ ਬਾਰੇ ਪੜ੍ਹ ਰਹੀ ਸੀ ਉਸਨੇ 15 ਦਿਨਾਂ ਦੇ ਅੰਦਰ ਸੁਪਰਸਟਾਰ ਰਾਲਿਆਕਪੂਰ ਨੂੰ ਮਾਲ ਵਿੱਚ ਬੁਲਾਉਣ ਲਈ ਵੀ ਸਦਾ ਦੇ ਦਿੱਤਾ ਸੀ। ਉਸਨੇ ਟਵਿਟਰ ਅਤੇ ਇੰਸਟਾਗ੍ਰਾਮ ਉੱਤੇ ਟਰਨ ਕੋਟ ਨਾਮਕ ਅਕਾਊਂਟ ਵੀ ਬਣਾ ਲਿਆ। ਚੜਦੇ ਸੂਰਜ ਦੀ ਤਸਵੀਰਾਂ ਦੀਆਂ ਟਿਕਟਾ ਬਣਾ ਕੇ ਮਾਲ ਵਿੱਚ ਆਉਣ ਵਾਲੇ ਗਾਹਕਾਂ ਨੂੰ ਦੇਣ ਲਗ ਗਏ। ਜਦੋਂ ਕੀਮਤਾਂ ਨਿਰਧਾਰਣ ਕਰਨ ਦਾ ਸਮਾਂ ਆਇਆ ਤਾਂ ਉਹਨਾਂ ਨੂੰ ਆਪਣੇ ਮਾਹਰ ਤੋਂ ਕੀਮਤਾਂ ਨੂੰ ਬਹੁਤ ਉੱਚਾ ਰਖਣ ਦਾ ਸੁਝਾਅ ਮਿਲਿਆ ਤਾਂ ਜੋ ਖੋਜ ਅਤੇ ਵਿਕਾਸ ਲਾਗਤ ਨੂੰ ਜਲਦੀ ਤੋਂ ਜਲਦੀ ਵਸੂਲਿਆ ਜਾ ਸਕੇ। ਵਿਭਾ ਇਸ ਸੰਬੰਧੀ ਥੋੜੀ ਝਿੜਕ ਰਹੀ ਸੀ ਪਰ ਉਸਨੇ " ਟਰਨ ਕੋਟ " ਦੀ ਕੀਮਤ ਉਤਪਾਦਨ ਲਾਗਤ ਜਮਾ ਇੱਕ ਆਮ / ਜਾਇਜ਼ ਲਾਭ ਤੇ ਨਿਰਧਾਰਿਤ ਕਰਨ ਦਾ ਫੈਸਲਾ ਕੀਤਾ

ਆਪਣੀ ਵਸਤੂ ਦਾ ਇਨਸਟਾਗ੍ਰਾਮ ਅਤੇ ਟਵਿਟਰ ਤੇ ਪ੍ਰਚਾਰ ਕਰਨਾ ਕੀ ਕਹਿਲਵੇਗਾ?

1. ਰੇਖਾ ਤੋਂ ਉੱਪਰ ਦੀ ਵਿਧੀ
2. ਰੇਖਾ ਤੋਂ ਹੇਠਲੀ ਵਿਧੀ
3. ਰੇਖਾ ਦੇ ਅਨੁਰੂਪ ਵਿਧੀ
4. ਅਪ੍ਰਤੱਖ ਵਿਕਰੀ ਯੋਜਨਾ ਵਿਧੀ

**Options :**

- 485584134037. 1
- 485584134038. 2
- 485584134039. 3
- 485584134040. 4

**Sub-Section Number :** 3  
**Sub-Section Id :** 4855842424  
**Question Shuffling Allowed :** No  
**Is Section Default? :** null

**Question Number : 96 Question Id : 48558433511 Question Type : MCQ Option Shuffling : No Is Question Mandatory : No Calculator : None Response Time : N.A Think Time : N.A Minimum Instruction Time : 0 Correct Marks : 5 Wrong Marks : 1**

**Question Key Details :**

Key	Value
Comprehension	Comp2

Mergers: Read the case and answer the questions (46-50)

Gaurav owned an event management company called 'Lotus Ltd.' in Mumbai. He used to organise weddings, meetings, conferences, etc. These events were full of activities, music, food and entertainment. He used to outsource decoration material, food as well as entertainment from different vendors.

Ms. Geetika was an owner of catering and decoration company called Miles Ltd. in Mumbai. She used to cater the food and decoration needs of various customers such as corporate as well as family functions.

Gaurav & Geetika were performing well in their respective businesses until covid-19 lockdown was introduced. Due to lack of demand for food, decoration and events, both the companies started facing losses. As the lockdown was lifted, nearly after a year, both Gaurav and Geetika were facing problems in managing their increasing operational costs with lesser number of customers. As they were planning to look for better business opportunity, they got to meet each other at an 'exponential' organised by trades of Mumbai at BKC ground.

In this 'exponential', there were different traders sharing their business ideas with each other. Hence, it was here that Gaurav and Geetika decided to restart their business by merging their operations with a new company name. 'G<sup>2</sup> Lotus Miles Ltd'. They both shared their contacts of vendors and customers with each other and started getting order for events, food, decoration, entertainment, etc. Their business started blooming as their costs were lesser and more customers with demand of services given by Gaurav and Geetika.

Now its been two years that both of them have grown their business into other cities of Maharashtra like, Pune, Ahmednagar and Nagpur under the company name of 'G<sup>2</sup> Lotus Miles Ltd'. The company is growing with increased annual sales of 30%.

Which of the following is applicable in case of "G<sup>2</sup> Lotus Miles ltd"?

1. Product extension merger
2. Market extension merger
3. Vertical merger
4. Horizontal merger

**Options :**

- 485584134041. 1
- 485584134042. 2
- 485584134043. 3
- 485584134044. 4

**Question Number : 96 Question Id : 48558433511 Question Type : MCQ Option Shuffling : No Is Question Mandatory : No Calculator : None Response Time : N.A Think Time : N.A Minimum Instruction Time : 0**

**Correct Marks : 5 Wrong Marks : 1**

**Question Key Details :**

Key	Value
Comprehension	Comp2

ਗੋਰਵ ਇੱਕ ਇਵੈਂਟ ਪ੍ਰਬੰਧਨ ਕੰਪਨੀ " ਲੋਟਸ ਲਿਮਿਟੇਡ " ਦੇ ਮਾਲਕ ਹਨ। ਉਹ ਵਿਆਹ, ਸਮਾਰੋਹ ਅਤੇ ਕਾਂਫਰੇਂਸਾਂ ਦਾ ਆਯੋਜਨ ਕਰਨ ਨਾਲ ਸੰਬੰਧਤ ਸਨ। ਇਹ ਇਵੈਂਟਸ ਵਿਭਿੰਨ ਕਿਰਿਆਵਾਂ, ਸੰਗੀਤ, ਭੋਜਨ ਅਤੇ ਮਨੋਰੰਜਨ ਨਾਲ ਭਰਪੂਰ ਸਨ। ਗੋਰਵ ਸਮਗਰੀ, ਖਾਣੇ ਅਤੇ ਮਨੋਰੰਜਨ ਲਈ ਬਾਹਰਲੇ ਸਰੋਤਾਂ ਤੋਂ ਨਿਰਭਰ ਰਹਿੰਦਾ ਸੀ।

ਮਿਸ ਗੀਤਿਕਾ ਮਾਈਲਸ ਲਿਮਿਟੇਡ ਦੇ ਮਾਲਕ ਹਨ ਜੋ ਮੁੰਬਈ ਵਿੱਚ ਸਥਾਪਿਤ ਇੱਕ ਕੈਟਰਿੰਗ ਅਤੇ ਸਜਾਵਟ ਸੰਬੰਧੀ ਕੰਪਨੀ ਹੈ। ਉਹ ਪਰਿਵਾਰਕ ਅਤੇ ਵਪਾਰ ਸਮਾਰੋਹ ਵਿੱਚ ਭੋਜਨ ਦੀ ਵਿਵਸਥਾ ਕਰਨ ਦਾ ਕਾਰਜ ਕਰਦੀ ਸੀ।

ਗੋਰਵ ਅਤੇ ਗੀਤਿਕਾ covid-19 ਦੇ ਕਾਲ ਤੋਂ ਪਹਿਲਾਂ ਆਪਣੇ ਆਪਣੇ ਖੇਤਰਾਂ ਵਿੱਚ ਵਧੀਆ ਕੰਮ ਕਰ ਰਹੇ ਸਨ। ਪਰ ਬਾਅਦ ਵਿੱਚ ਮੰਗ ਦੀ ਕਮੀ ਕਰਕੇ ਦੋਨੋਂ ਖੇਤਰ ਹਾਨੀ ਦਾ ਸਾਹਮਣਾ ਕਰਦੇ ਪਏ ਸਨ। ਜਿਵੇਂ ਹੀ ਲਾਕ-ਡਾਊਨ ਦੀਆਂ ਪਾਬੰਦੀਆਂ ਨੂੰ ਹਟਾਇਆ ਗਿਆ, ਇੱਕ ਸਾਲ ਬਾਅਦ, ਦੋਵੇਂ, ਗੋਰਵ ਅਤੇ ਗੀਤਿਕਾ, ਉਤਪਾਦਨ ਦੀ ਉੱਚੀ ਲਾਗਤ ਅਤੇ ਘੱਟ ਗਾਹਕਾਂ ਦੀ ਸਮੱਸਿਆਵਾਂ ਤੋਂ ਜੂਝ ਰਹੇ ਸਨ। ਜਦੋਂ ਉਹ ਬਿਹਤਰ ਵਪਾਰਕ ਅਵਸਰ ਦੀ ਭਾਲ ਕਰ ਰਹੇ ਸਨ ਉਹ ਇੱਕ ਦੂਸਰੇ ਨਾਲ ਮਿਲੇ। ਉਹ ਮੁੰਬਈ ਦੇ bkc ਗਰਾਂਊਂਡ ਵਿੱਚ ਇੱਕ ਸੰਗਠਿਤ ਸਮਾਰੋਹ " exponential " ਵਿੱਚ ਮਿਲੇ।

" exponential " ਵਿੱਖੇ ਅਲਗ ਅਲਗ ਵਪਾਰੀ ਸਨ ਜੋ ਵਪਾਰ ਸੰਬੰਧੀ ਵਿਚਾਰਾਂ ਨੂੰ ਸਾਂਝਾ ਕਰ ਰਹੇ ਸਨ। ਇਸ ਤੋਂ ਬਾਅਦ ਗੋਰਵ ਅਤੇ ਗੀਤਿਕਾ ਨੇ ਆਪਣੇ ਵਪਾਰ ਨੂੰ ਮਿਲਾ ਕੇ ਮੁੜ ਸ਼ੁਰੂ ਕਰਨ ਦਾ ਵਿਚਾਰ ਕੀਤਾ। ਨਵੀਂ ਕੰਪਨੀ ਦਾ ਨਾਂ G ਲੋਟਸ ਮਿਲਜ਼ ਲਿਮ: ਰੱਖਿਆ। ਉਹਨਾਂ ਨੇ ਆਪਣੇ ਵਿਕਰੇਤਾਵਾਂ ਅਤੇ ਖਰੀਦਾਰਾਂ ਦੀ ਜਾਣਕਾਰੀ ਸਾਂਝੀ ਕੀਤੀ ਅਤੇ ਆਰਡਰ, ਖਾਣਾ, ਸਜਾਵਟ, ਮਨੋਰੰਜਨ ਦਾ ਪ੍ਰਬੰਧ ਕਰਨ ਲਗੇ। ਉਹਨਾਂ ਦਾ ਵਪਾਰ ਪ੍ਰਫੁੱਲਤ ਹੋਣ ਲਗਾ ਕਿਉਂਕਿ ਲਾਗਤ ਘੱਟ ਸੀ ਅਤੇ ਉਪਭੋਕਤਾ ਦੀ ਮੰਗ ਵੱਧ ਰਹੀ ਸੀ।

ਅੱਜ ਦੋ ਸਾਲ ਹੋ ਗਏ ਹਨ ਅਤੇ ਉਹਨਾਂ ਨੇ  $G^2$  ਲੋਟਸ ਕੰਪਨੀ ਦੇ ਨਾਂ ਨਾਲ ਆਪਣੇ ਵਪਾਰ ਨੂੰ ਮਹਾਰਾਸ਼ਟਰਾਂ ਕਈ ਹੋਰ ਸ਼ਹਿਰਾਂ ਵਿੱਚ ਸਥਾਪਿਤ ਕੀਤਾ ਹੈ ਜਿਵੇਂ ਪੂਨਾ, ਅਹਿਮਦ ਨਗਰ, ਨਾਗਪੁਰ ਆਦਿ। ਕੰਪਨੀ ਦੀ ਸਲਾਨਾ ਆਮਦਨ ਵਿੱਚ 30% ਦਾ ਵਾਧਾ ਹੋਇਆ।

ਲੋਟਸ ਮਾਈਲਸ ਲਿਮਿਟੇਡ ਵਿੱਚ ਕਿਹੜੀ ਚੀਜ਼ ਲਾਗੂ ਹੋਵੇਗੀ?

1. ਵਸਤੂ ਵਿਸਤਾਰ ਮਿਲਾਪ
2. ਬਜ਼ਾਰ ਵਿਸਤਾਰ ਮਿਲਾਪ
3. ਖੜਵਾ ਮਿਲਣ
4. ਲੋਟਵਾ ਮਿਲਣ

**Options :**

485584134041. 1  
485584134042. 2  
485584134043. 3  
485584134044. 4

**Question Number : 97 Question Id : 48558433512 Question Type : MCQ Option Shuffling : No Is Question Mandatory : No Calculator : None Response Time : N.A Think Time : N.A Minimum Instruction Time : 0**

**Correct Marks : 5 Wrong Marks : 1**

**Question Key Details :**

Key	Value
Comprehension	Comp2



Mergers: Read the case and answer the questions (46-50)

Gaurav owned an event management company called 'Lotus Ltd.' in Mumbai. He used to organise weddings, meetings, conferences, etc. These events were full of activities, music, food and entertainment. He used to outsource decoration material, food as well as entertainment from different vendors.

Ms. Geetika was an owner of catering and decoration company called Miles Ltd. in Mumbai. She used to cater the food and decoration needs of various customers such as corporate as well as family functions.

Gaurav & Geetika were performing well in their respective businesses until covid-19 lockdown was introduced. Due to lack of demand for food, decoration and events, both the companies started facing losses. As the lockdown was lifted, nearly after a year, both Gaurav and Geetika were facing problems in managing their increasing operational costs with lesser number of customers. As they were planning to look for better business opportunity, they got to meet each other at an 'exponential' organised by trades of Mumbai at BKC ground.

In this 'exponential', there were different traders sharing their business ideas with each other. Hence, it was here that Gaurav and Geetika decided to restart their business by merging their operations with a new company name. 'G<sup>2</sup> Lotus Miles Ltd'. They both shared their contacts of vendors and customers with each other and started getting order for events, food, decoration, entertainment, etc. Their business started blooming as their costs were lesser and more customers with demand of services given by Gaurav and Geetika.

Now its been two years that both of them have grown their business into other cities of Maharashtra like, Pune, Ahmednagar and Nagpur under the company name of 'G<sup>2</sup> Lotus Miles Ltd'. The company is growing with increased annual sales of 30%.

The new company so formed "G<sup>2</sup> Lotus Miles Ltd" is an example of:

1. Acquisition
2. Franchising
3. Amalgamation
4. Absorption

**Options :**

- 485584134045. 1
- 485584134046. 2
- 485584134047. 3
- 485584134048. 4

**Question Number : 97 Question Id : 48558433512 Question Type : MCQ Option Shuffling : No Is Question Mandatory : No Calculator : None Response Time : N.A Think Time : N.A Minimum Instruction Time : 0**

**Correct Marks : 5 Wrong Marks : 1**

**Question Key Details :**

Key	Value
Comprehension	Comp2

ਗੋਰਵ ਇੱਕ ਇਵੈਂਟ ਪ੍ਰਬੰਧਨ ਕੰਪਨੀ " ਲੋਟਸ ਲਿਮਿਟੇਡ " ਦੇ ਮਾਲਕ ਹਨ। ਉਹ ਵਿਆਹ, ਸਮਾਰੋਹ ਅਤੇ ਕਾਂਫਰੇਂਸਾਂ ਦਾ ਆਯੋਜਨ ਕਰਨ ਨਾਲ ਸੰਬੰਧਤ ਸਨ। ਇਹ ਇਵੈਂਟਸ ਵਿਭਿੰਨ ਕਿਰਿਆਵਾਂ, ਸੰਗੀਤ, ਭੋਜਨ ਅਤੇ ਮਨੋਰੰਜਨ ਨਾਲ ਭਰਪੂਰ ਸਨ। ਗੋਰਵ ਸਮਗਰੀ, ਖਾਣੇ ਅਤੇ ਮਨੋਰੰਜਨ ਲਈ ਬਾਹਰਲੇ ਸਰੋਤਾਂ ਤੋਂ ਨਿਰਭਰ ਰਹਿੰਦਾ ਸੀ।

ਮਿਸ ਗੀਤਿਕਾ ਮਾਈਲਸ ਲਿਮਿਟੇਡ ਦੇ ਮਾਲਕ ਹਨ ਜੋ ਮੁੰਬਈ ਵਿੱਚ ਸਥਾਪਿਤ ਇੱਕ ਕੈਟਰਿੰਗ ਅਤੇ ਸਜਾਵਟ ਸੰਬੰਧੀ ਕੰਪਨੀ ਹੈ। ਉਹ ਪਰਿਵਾਰਕ ਅਤੇ ਵਪਾਰ ਸਮਾਰੋਹ ਵਿੱਚ ਭੋਜਨ ਦੀ ਵਿਵਸਥਾ ਕਰਨ ਦਾ ਕਾਰਜ ਕਰਦੀ ਸੀ।

ਗੋਰਵ ਅਤੇ ਗੀਤਿਕਾ covid-19 ਦੇ ਕਾਲ ਤੋਂ ਪਹਿਲਾਂ ਆਪਣੇ ਆਪਣੇ ਖੇਤਰਾਂ ਵਿੱਚ ਵਧੀਆ ਕੰਮ ਕਰ ਰਹੇ ਸਨ। ਪਰ ਬਾਅਦ ਵਿੱਚ ਮੰਗ ਦੀ ਕਮੀ ਕਰਕੇ ਦੋਨੋਂ ਖੇਤਰ ਹਾਨੀ ਦਾ ਸਾਹਮਣਾ ਕਰਦੇ ਪਏ ਸਨ। ਜਿਵੇਂ ਹੀ ਲਾਕ-ਡਾਊਨ ਦੀਆਂ ਪਾਬੰਦੀਆਂ ਨੂੰ ਹਟਾਇਆ ਗਿਆ, ਇੱਕ ਸਾਲ ਬਾਅਦ, ਦੋਵੇਂ, ਗੋਰਵ ਅਤੇ ਗੀਤਿਕਾ, ਉਤਪਾਦਨ ਦੀ ਉੱਚੀ ਲਾਗਤ ਅਤੇ ਘੱਟ ਗਾਹਕਾਂ ਦੀ ਸਮੱਸਿਆਵਾਂ ਤੋਂ ਜੂਝ ਰਹੇ ਸਨ। ਜਦੋਂ ਉਹ ਬਿਹਤਰ ਵਪਾਰਕ ਅਵਸਰ ਦੀ ਭਾਲ ਕਰ ਰਹੇ ਸਨ ਉਹ ਇੱਕ ਦੂਸਰੇ ਨਾਲ ਮਿਲੇ। ਉਹ ਮੁੰਬਈ ਦੇ bkc ਗਰਾਂਊਡ ਵਿੱਚ ਇੱਕ ਸੰਗਠਿਤ ਸਮਾਰੋਹ " exponential " ਵਿੱਚ ਮਿਲੇ।

" exponential " ਵਿੱਖੇ ਅਲਗ ਅਲਗ ਵਪਾਰੀ ਸਨ ਜੋ ਵਪਾਰ ਸੰਬੰਧੀ ਵਿਚਾਰਾਂ ਨੂੰ ਸਾਂਝਾ ਕਰ ਰਹੇ ਸਨ। ਇਸ ਤੋਂ ਬਾਅਦ ਗੋਰਵ ਅਤੇ ਗੀਤਿਕਾ ਨੇ ਆਪਣੇ ਵਪਾਰ ਨੂੰ ਮਿਲਾ ਕੇ ਮੁੜ ਸ਼ੁਰੂ ਕਰਨ ਦਾ ਵਿਚਾਰ ਕੀਤਾ। ਨਵੀਂ ਕੰਪਨੀ ਦਾ ਨਾਂ G ਲੋਟਸ ਮਿਲਜ਼ ਲਿਮ: ਰੱਖਿਆ। ਉਹਨਾਂ ਨੇ ਆਪਣੇ ਵਿਕਰੇਤਾਵਾਂ ਅਤੇ ਖਰੀਦਾਰਾਂ ਦੀ ਜਾਣਕਾਰੀ ਸਾਂਝੀ ਕੀਤੀ ਅਤੇ ਆਰਡਰ, ਖਾਣਾ, ਸਜਾਵਟ, ਮਨੋਰੰਜਨ ਦਾ ਪ੍ਰਬੰਧ ਕਰਨ ਲਗੇ। ਉਹਨਾਂ ਦਾ ਵਪਾਰ ਪ੍ਰਫੁੱਲਤ ਹੋਣ ਲਗਾ ਕਿਉਂਕਿ ਲਾਗਤ ਘੱਟ ਸੀ ਅਤੇ ਉਪਭੋਕਤਾ ਦੀ ਮੰਗ ਵੱਧ ਰਹੀ ਸੀ।

ਅੱਜ ਦੋ ਸਾਲ ਹੋ ਗਏ ਹਨ ਅਤੇ ਉਹਨਾਂ ਨੇ G<sup>2</sup> ਲੋਟਸ ਕੰਪਨੀ ਦੇ ਨਾਂ ਨਾਲ ਆਪਣੇ ਵਪਾਰ ਨੂੰ ਮਹਾਂਰਾਸ਼ਟਰਾਂ ਕਈ ਹੋਰ ਸ਼ਹਿਰਾਂ ਵਿੱਚ ਸਥਾਪਿਤ ਕੀਤਾ ਹੈ ਜਿਵੇਂ ਪੂਨਾ, ਅਹਿਮਦ ਨਗਰ, ਨਾਗਪੁਰ ਆਦਿ। ਕੰਪਨੀ ਦੀ ਸਲਾਨਾ ਆਮਦਨ ਵਿੱਚ 30% ਦਾ ਵਾਧਾ ਹੋਇਆ।

G<sup>2</sup> ਲੋਟਸ ਮਿਲਜ਼ ਲਿਮਿਟਿਡ ਨਾਂਦੀ ਨਵੀਂ ਕੰਪਨੀ, ਕਿਸਦਾ ਉਦਾਹਰਣ ਹੈ?

1. ਪ੍ਰਾਪਤੀ
2. ਵਸਤੂ ਵਿਸ਼ੇਸ਼ ਅਧਿਕਾਰ
3. ਮਿਲਣ
4. ਸੇਖਣਾ

**Options :**

485584134045. 1  
 485584134046. 2  
 485584134047. 3  
 485584134048. 4

**Question Number : 98 Question Id : 48558433513 Question Type : MCQ Option Shuffling : No Is Question Mandatory : No Calculator : None Response Time : N.A Think Time : N.A Minimum Instruction Time : 0**

**Correct Marks : 5 Wrong Marks : 1**

**Question Key Details :**

Key	Value
Comprehension	Comp2

Mergers: Read the case and answer the questions (46-50)

Gaurav owned an event management company called 'Lotus Ltd.' in Mumbai. He used to organise weddings, meetings, conferences, etc. These events were full of activities, music, food and entertainment. He used to outsource decoration material, food as well as entertainment from different vendors.

Ms. Geetika was an owner of catering and decoration company called Miles Ltd. in Mumbai. She used to cater the food and decoration needs of various customers such as corporate as well as family functions.

Gaurav & Geetika were performing well in their respective businesses until covid-19 lockdown was introduced. Due to lack of demand for food, decoration and events, both the companies started facing losses. As the lockdown was lifted, nearly after a year, both Gaurav and Geetika were facing problems in managing their increasing operational costs with lesser number of customers. As they were planning to look for better business opportunity, they got to meet each other at an 'exponential' organised by trades of Mumbai at BKC ground.

In this 'exponential', there were different traders sharing their business ideas with each other. Hence, it was here that Gaurav and Geetika decided to restart their business by merging their operations with a new company name. 'G<sup>2</sup> Lotus Miles Ltd'. They both shared their contacts of vendors and customers with each other and started getting order for events, food, decoration, entertainment, etc. Their business started blooming as their costs were lesser and more customers with demand of services given by Gaurav and Geetika.

Now its been two years that both of them have grown their business into other cities of Maharashtra like, Pune, Ahmednagar and Nagpur under the company name of 'G<sup>2</sup> Lotus Miles Ltd'. The company is growing with increased annual sales of 30%.

"G<sup>2</sup> Lotus Miles Ltd." is related to-

1. Manufacturing
2. Service
3. Distribution
4. Trading

**Options :**

- 485584134049. 1
- 485584134050. 2
- 485584134051. 3
- 485584134052. 4

**Question Number : 98 Question Id : 48558433513 Question Type : MCQ Option Shuffling : No Is Question Mandatory : No Calculator : None Response Time : N.A Think Time : N.A Minimum Instruction Time : 0**

**Correct Marks : 5 Wrong Marks : 1**

**Question Key Details :**

Key	Value
Comprehension	Comp2

ਗੋਰਵ ਇੱਕ ਇਵੈਂਟ ਪ੍ਰਬੰਧਨ ਕੰਪਨੀ " ਲੋਟਸ ਲਿਮਿਟੇਡ " ਦੇ ਮਾਲਕ ਹਨ। ਉਹ ਵਿਆਹ, ਸਮਾਰੋਹ ਅਤੇ ਕਾਂਫਰੇਂਸਾਂ ਦਾ ਆਯੋਜਨ ਕਰਨ ਨਾਲ ਸੰਬੰਧਤ ਸਨ। ਇਹ ਇਵੈਂਟਸ ਵਿਭਿੰਨ ਕਿਰਿਆਵਾਂ, ਸੰਗੀਤ, ਭੋਜਨ ਅਤੇ ਮਨੋਰੰਜਨ ਨਾਲ ਭਰਪੂਰ ਸਨ। ਗੋਰਵ ਸਮਗਰੀ, ਖਾਣੇ ਅਤੇ ਮਨੋਰੰਜਨ ਲਈ ਬਾਹਰਲੇ ਸਰੋਤਾਂ ਤੇ ਨਿਰਭਰ ਰਹਿੰਦਾ ਸੀ।

ਮਿਸ ਗੀਤਿਕਾ ਮਾਈਲਸ ਲਿਮਿਟੇਡ ਦੇ ਮਾਲਕ ਹਨ ਜੋ ਮੁੰਬਈ ਵਿੱਚ ਸਥਾਪਿਤ ਇੱਕ ਕੈਟਰਿੰਗ ਅਤੇ ਸਜਾਵਟ ਸੰਬੰਧੀ ਕੰਪਨੀ ਹੈ। ਉਹ ਪਰਿਵਾਰਕ ਅਤੇ ਵਪਾਰ ਸਮਾਰੋਹ ਵਿੱਚ ਭੋਜਨ ਦੀ ਵਿਵਸਥਾ ਕਰਨ ਦਾ ਕਾਰਜ ਕਰਦੀ ਸੀ।

ਗੋਰਵ ਅਤੇ ਗੀਤਿਕਾ covid-19 ਦੇ ਕਾਲ ਤੋਂ ਪਹਿਲਾਂ ਆਪਣੇ ਆਪਣੇ ਖੇਤਰਾਂ ਵਿੱਚ ਵਧੀਆ ਕੰਮ ਕਰ ਰਹੇ ਸਨ। ਪਰ ਬਾਅਦ ਵਿੱਚ ਮੰਗ ਦੀ ਕਮੀ ਕਰਕੇ ਦੋਨੋਂ ਖੇਤਰ ਹਾਨੀ ਦਾ ਸਾਹਮਣਾ ਕਰਦੇ ਪਏ ਸਨ। ਜਿਵੇਂ ਹੀ ਲਾਕ-ਡਾਊਨ ਦੀਆਂ ਪਾਬੰਦੀਆਂ ਨੂੰ ਹਟਾਇਆ ਗਿਆ, ਇੱਕ ਸਾਲ ਬਾਅਦ, ਦੋਵੇਂ, ਗੋਰਵ ਅਤੇ ਗੀਤਿਕਾ, ਉਤਪਾਦਨ ਦੀ ਉੱਚੀ ਲਾਗਤ ਅਤੇ ਘੱਟ ਗਾਹਕਾਂ ਦੀ ਸਮੱਸਿਆਵਾਂ ਤੋਂ ਜੂਝ ਰਹੇ ਸਨ। ਜਦੋਂ ਉਹ ਬਿਹਤਰ ਵਪਾਰਕ ਅਵਸਰ ਦੀ ਭਾਲ ਕਰ ਰਹੇ ਸਨ ਉਹ ਇੱਕ ਦੂਸਰੇ ਨਾਲ ਮਿਲੇ। ਉਹ ਮੁੰਬਈ ਦੇ bkc ਗਰਾਂਊਂਡ ਵਿੱਚ ਇੱਕ ਸੰਗਠਿਤ ਸਮਾਰੋਹ " exponential " ਵਿੱਚ ਮਿਲੇ।

" exponential " ਵਿੱਖੇ ਅਲਗ ਅਲਗ ਵਪਾਰੀ ਸਨ ਜੋ ਵਪਾਰ ਸੰਬੰਧੀ ਵਿਚਾਰਾਂ ਨੂੰ ਸਾਂਝਾ ਕਰ ਰਹੇ ਸਨ। ਇਸ ਤੋਂ ਬਾਅਦ ਗੋਰਵ ਅਤੇ ਗੀਤਿਕਾ ਨੇ ਆਪਣੇ ਵਪਾਰ ਨੂੰ ਮਿਲਾ ਕੇ ਮੁੜ ਸ਼ੁਰੂ ਕਰਨ ਦਾ ਵਿਚਾਰ ਕੀਤਾ। ਨਵੀਂ ਕੰਪਨੀ ਦਾ ਨਾਂ G ਲੋਟਸ ਮਿਲਜ਼ ਲਿਮ: ਰੱਖਿਆ। ਉਹਨਾਂ ਨੇ ਆਪਣੇ ਵਿਕਰੇਤਾਵਾਂ ਅਤੇ ਖਰੀਦਾਰਾਂ ਦੀ ਜਾਣਕਾਰੀ ਸਾਂਝੀ ਕੀਤੀ ਅਤੇ ਆਰਡਰ, ਖਾਣਾ, ਸਜਾਵਟ, ਮਨੋਰੰਜਨ ਦਾ ਪ੍ਰਬੰਧ ਕਰਨ ਲਗੇ। ਉਹਨਾਂ ਦਾ ਵਪਾਰ ਪ੍ਰਫੁੱਲਤ ਹੋਣ ਲਗਾ ਕਿਉਂਕਿ ਲਾਗਤ ਘੱਟ ਸੀ ਅਤੇ ਉਪਭੋਕਤਾ ਦੀ ਮੰਗ ਵੱਧ ਰਹੀ ਸੀ।

ਅੱਜ ਦੇ ਸਾਲ ਹੋ ਗਏ ਹਨ ਅਤੇ ਉਹਨਾਂ ਨੇ G<sup>2</sup> ਲੋਟਸ ਕੰਪਨੀ ਦੇ ਨਾਂ ਨਾਲ ਆਪਣੇ ਵਪਾਰ ਨੂੰ ਮਹਾਂਰਾਸ਼ਟਰਾਂ ਕਈ ਹੋਰ ਸ਼ਹਿਰਾਂ ਵਿੱਚ ਸਥਾਪਿਤ ਕੀਤਾ ਹੈ ਜਿਵੇਂ ਪੂਨਾ, ਅਹਿਮਦ ਨਗਰ, ਨਾਗਪੁਰ ਆਦਿ। ਕੰਪਨੀ ਦੀ ਸਲਾਨਾ ਆਮਦਨ ਵਿੱਚ 30% ਦਾ ਵਾਧਾ ਹੋਇਆ।

G<sup>2</sup> ਲੋਟਸ ਮਿਲਜ਼ ਲਿਮ: ਸੰਬੰਧਤ ਹੈ?

1. ਉਤਪਾਦਨਤਾ
2. ਸੇਵਾਵਾਂ
3. ਵਟਾਂਦਰੇ ਨਾਲ
4. ਵਪਾਰ

**Options :**

485584134049. 1  
485584134050. 2  
485584134051. 3  
485584134052. 4

**Question Number : 99 Question Id : 48558433514 Question Type : MCQ Option Shuffling : No Is Question Mandatory : No Calculator : None Response Time : N.A Think Time : N.A Minimum Instruction Time : 0**

**Correct Marks : 5 Wrong Marks : 1**

**Question Key Details :**

Key	Value
Comprehension	Comp2

Mergers: Read the case and answer the questions (46-50)

Gaurav owned an event management company called 'Lotus Ltd.' in Mumbai. He used to organise weddings, meetings, conferences, etc. These events were full of activities, music, food and entertainment. He used to outsource decoration material, food as well as entertainment from different vendors.

Ms. Geetika was an owner of catering and decoration company called Miles Ltd. in Mumbai. She used to cater the food and decoration needs of various customers such as corporate as well as family functions.

Gaurav & Geetika were performing well in their respective businesses until covid-19 lockdown was introduced. Due to lack of demand for food, decoration and events, both the companies started facing losses. As the lockdown was lifted, nearly after a year, both Gaurav and Geetika were facing problems in managing their increasing operational costs with lesser number of customers. As they were planning to look for better business opportunity, they got to meet each other at an 'exponential' organised by trades of Mumbai at BKC ground.

In this 'exponential', there were different traders sharing their business ideas with each other. Hence, it was here that Gaurav and Geetika decided to restart their business by merging their operations with a new company name. 'G<sup>2</sup> Lotus Miles Ltd'. They both shared their contacts of vendors and customers with each other and started getting order for events, food, decoration, entertainment, etc. Their business started blooming as their costs were lesser and more customers with demand of services given by Gaurav and Geetika.

Now its been two years that both of them have grown their business into other cities of Maharashtra like, Pune, Ahmednagar and Nagpur under the company name of 'G<sup>2</sup> Lotus Miles Ltd'. The company is growing with increased annual sales of 30%.

Match List I with List II

LIST I		LIST II	
A.	Event Management Company	I.	Miles Ltd
B.	External Expansion	II.	Lotus Ltd.
C.	Operational synergy	III.	Merger
D.	Catering and decoration company	IV.	G <sup>2</sup> Lotus Miles Ltd

Choose the correct answer from the options given below:

1. A-I, B-III, C-II, D-IV
2. A-II, B-III, C-IV, D-I
3. A-III, B-II, C-IV, D-I
4. A-IV, B-III, C-II, D-I

**Options :**

485584134053. 1  
485584134054. 2  
485584134055. 3  
485584134056. 4

**Question Number : 99 Question Id : 48558433514 Question Type : MCQ Option Shuffling : No Is Question Mandatory : No Calculator : None Response Time : N.A Think Time : N.A Minimum Instruction Time : 0**

**Correct Marks : 5 Wrong Marks : 1**

**Question Key Details :**

Key	Value
Comprehension	Comp2

ਗੋਰਵ ਇੱਕ ਇਵੈਂਟ ਪ੍ਰਬੰਧਨ ਕੰਪਨੀ " ਲੋਟਸ ਲਿਮਿਟੇਡ " ਦੇ ਮਾਲਕ ਹਨ। ਉਹ ਵਿਆਹ, ਸਮਾਰੋਹ ਅਤੇ ਕਾਂਫਰੇਂਸਾਂ ਦਾ ਆਯੋਜਨ ਕਰਨ ਨਾਲ ਸੰਬੰਧਤ ਸਨ। ਇਹ ਇਵੈਂਟਸ ਵਿਭਿੰਨ ਕਿਰਿਆਵਾਂ, ਸੰਗੀਤ, ਭੋਜਨ ਅਤੇ ਮਨੋਰੰਜਨ ਨਾਲ ਭਰਪੂਰ ਸਨ। ਗੋਰਵ ਸਮਗਰੀ, ਖਾਣੇ ਅਤੇ ਮਨੋਰੰਜਨ ਲਈ ਬਾਹਰਲੇ ਸਰੋਤਾਂ ਤੇ ਨਿਰਭਰ ਰਹਿੰਦਾ ਸੀ।

ਮਿਸ ਗੀਤਿਕਾ ਮਾਈਲਸ ਲਿਮਿਟੇਡ ਦੇ ਮਾਲਕ ਹਨ ਜੋ ਮੁੰਬਈ ਵਿੱਚ ਸਥਾਪਿਤ ਇੱਕ ਕੈਟਰਿੰਗ ਅਤੇ ਸਜਾਵਟ ਸੰਬੰਧੀ ਕੰਪਨੀ ਹੈ। ਉਹ ਪਰਿਵਾਰਕ ਅਤੇ ਵਪਾਰ ਸਮਾਰੋਹ ਵਿੱਚ ਭੋਜਨ ਦੀ ਵਿਵਸਥਾ ਕਰਨ ਦਾ ਕਾਰਜ ਕਰਦੀ ਸੀ।

ਗੋਰਵ ਅਤੇ ਗੀਤਿਕਾ covid-19 ਦੇ ਕਾਲ ਤੋਂ ਪਹਿਲਾਂ ਆਪਣੇ ਆਪਣੇ ਖੇਤਰਾਂ ਵਿੱਚ ਵਧੀਆ ਕੰਮ ਕਰ ਰਹੇ ਸਨ। ਪਰ ਬਾਅਦ ਵਿੱਚ ਮੰਗ ਦੀ ਕਮੀ ਕਰਕੇ ਦੋਨੋਂ ਖੇਤਰ ਹਾਨੀ ਦਾ ਸਾਹਮਣਾ ਕਰਦੇ ਪਏ ਸਨ। ਜਿਵੇਂ ਹੀ ਲਾਕ-ਡਾਊਨ ਦੀਆਂ ਪਾਬੰਦੀਆਂ ਨੂੰ ਹਟਾਇਆ ਗਿਆ, ਇੱਕ ਸਾਲ ਬਾਅਦ, ਦੋਵੇਂ, ਗੋਰਵ ਅਤੇ ਗੀਤਿਕਾ, ਉਤਪਾਦਨ ਦੀ ਉੱਚੀ ਲਾਗਤ ਅਤੇ ਘੱਟ ਗਾਹਕਾਂ ਦੀ ਸਮੱਸਿਆਵਾਂ ਤੋਂ ਜੂਝ ਰਹੇ ਸਨ। ਜਦੋਂ ਉਹ ਬਿਹਤਰ ਵਪਾਰਕ ਅਵਸਰ ਦੀ ਭਾਲ ਕਰ ਰਹੇ ਸਨ ਉਹ ਇੱਕ ਦੂਸਰੇ ਨਾਲ ਮਿਲੇ। ਉਹ ਮੁੰਬਈ ਦੇ bkc ਗਰਾਂਉਡ ਵਿੱਚ ਇੱਕ ਸੰਗਠਿਤ ਸਮਾਰੋਹ " exponential " ਵਿੱਚ ਮਿਲੇ।

" exponential " ਵਿੱਖੇ ਅਲਗ ਅਲਗ ਵਪਾਰੀ ਸਨ ਜੋ ਵਪਾਰ ਸੰਬੰਧੀ ਵਿਚਾਰਾਂ ਨੂੰ ਸਾਂਝਾ ਕਰ ਰਹੇ ਸਨ। ਇਸ ਤੋਂ ਬਾਅਦ ਗੋਰਵ ਅਤੇ ਗੀਤਿਕਾ ਨੇ ਆਪਣੇ ਵਪਾਰ ਨੂੰ ਮਿਲਾ ਕੇ ਮੁੜ ਸ਼ੁਰੂ ਕਰਨ ਦਾ ਵਿਚਾਰ ਕੀਤਾ। ਨਵੀਂ ਕੰਪਨੀ ਦਾ ਨਾਂ G ਲੋਟਸ ਮਿਲਜ਼ ਲਿਮ: ਰੱਖਿਆ। ਉਹਨਾਂ ਨੇ ਆਪਣੇ ਵਿਕਰੇਤਾਵਾਂ ਅਤੇ ਖਰੀਦਾਰਾਂ ਦੀ ਜਾਣਕਾਰੀ ਸਾਂਝੀ ਕੀਤੀ ਅਤੇ ਆਰਡਰ, ਖਾਣਾ, ਸਜਾਵਟ, ਮਨੋਰੰਜਨ ਦਾ ਪ੍ਰਬੰਧ ਕਰਨ ਲਗੇ। ਉਹਨਾਂ ਦਾ ਵਪਾਰ ਪ੍ਰਫੁੱਲਤ ਹੋਣ ਲਗਾ ਕਿਉਂਕਿ ਲਾਗਤ ਘੱਟ ਸੀ ਅਤੇ ਉਪਭੋਕਤਾ ਦੀ ਮੰਗ ਵੱਧ ਰਹੀ ਸੀ।

ਅੱਜ ਦੋ ਸਾਲ ਹੋ ਗਏ ਹਨ ਅਤੇ ਉਹਨਾਂ ਨੇ G<sup>2</sup> ਲੋਟਸ ਕੰਪਨੀ ਦੇ ਨਾਂ ਨਾਲ ਆਪਣੇ ਵਪਾਰ ਨੂੰ ਮਹਾਂਰਾਸ਼ਟਰਾਂ ਕਈ ਹੋਰ ਸ਼ਹਿਰਾਂ ਵਿੱਚ ਸਥਾਪਿਤ ਕੀਤਾ ਹੈ ਜਿਵੇਂ ਪੂਨਾ, ਅਹਿਮਦ ਨਗਰ, ਨਾਗਪੁਰ ਆਦਿ। ਕੰਪਨੀ ਦੀ ਸਲਾਨਾ ਆਮਦਨ ਵਿੱਚ 30% ਦਾ ਵਾਧਾ ਹੋਇਆ।

ਸੂਚੀ I ਦਾ ਸੂਚੀ II ਨਾਲ ਮਿਲਾਣ ਕਰੋ:

ਸੂਚੀ I		ਸੂਚੀ II	
A.	ਇਵੈਂਟ ਪ੍ਰਬੰਧਨ ਕੰਪਨੀ	I.	ਮਿਲਜ਼ ਲਿਮ:
B.	ਬਾਹਰੀ ਵਿਸਤਰਨ	II.	ਲੋਟਸ ਲਿਮ:
C.	ਕਾਰਜਸ਼ਾਲੀ ਸਿਨਰਜੀ	III.	ਮਿਲਣ
D.	ਕੈਟਰਿੰਗ ਅਤੇ ਸਜਾਵਟ ਸੰਬੰਧੀ ਕੰਪਨੀ	IV.	G <sup>2</sup> ਲੋਟਸ ਮਾਈਲਜ਼ ਲਿਮ:

ਹੇਠਾਂ ਦਿੱਤੇ ਵਿਕਲਪਾਂ ਵਿੱਚੋਂ ਸਹੀ ਉੱਤਰ ਚੁਣੋ:

1. A-I, B-III, C-II, D-IV
2. A-II, B-III, C-IV, D-I
3. A-III, B-II, C-IV, D-I
4. A-IV, B-III, C-II, D-I

Options :

485584134053. 1  
485584134054. 2  
485584134055. 3  
485584134056. 4

Question Number : 100 Question Id : 48558433515 Question Type : MCQ Option Shuffling : No Is Question Mandatory : No Calculator : None Response Time : N.A Think Time : N.A Minimum Instruction Time : 0

Correct Marks : 5 Wrong Marks : 1

Question Key Details :

Key	Value
Comprehension	Comp2

Mergers: Read the case and answer the questions (46-50)

Gaurav owned an event management company called 'Lotus Ltd.' in Mumbai. He used to organise weddings, meetings, conferences, etc. These events were full of activities, music, food and entertainment. He used to outsource decoration material, food as well as entertainment from different vendors.

Ms. Geetika was an owner of catering and decoration company called Miles Ltd. in Mumbai. She used to cater the food and decoration needs of various customers such as corporate as well as family functions.

Gaurav & Geetika were performing well in their respective businesses until covid-19 lockdown was introduced. Due to lack of demand for food, decoration and events, both the companies started facing losses. As the lockdown was lifted, nearly after a year, both Gaurav and Geetika were facing problems in managing their increasing operational costs with lesser number of customers. As they were planning to look for better business opportunity, they got to meet each other at an 'exponential' organised by trades of Mumbai at BKC ground.

In this 'exponential', there were different traders sharing their business ideas with each other. Hence, it was here that Gaurav and Geetika decided to restart their business by merging their operations with a new company name. 'G<sup>2</sup> Lotus Miles Ltd'. They both shared their contacts of vendors and customers with each other and started getting order for events, food, decoration, entertainment, etc. Their business started blooming as their costs were lesser and more customers with demand of services given by Gaurav and Geetika.

Now it's been two years that both of them have grown their business into other cities of Maharashtra like, Pune, Ahmednagar and Nagpur under the company name of 'G<sup>2</sup> Lotus Miles Ltd'. The company is growing with increased annual sales of 30%.

If Gaurav could raise sufficient funds to acquire 'Miles Ltd'. This acquisition would be called:

1. Friendly Acquisition
2. Reverse Acquisition
3. Back flip Acquisition
4. Hostile Acquisition

**Options :**

- 485584134057. 1
- 485584134058. 2
- 485584134059. 3
- 485584134060. 4

**Question Number : 100 Question Id : 48558433515 Question Type : MCQ Option Shuffling : No Is Question Mandatory : No Calculator : None Response Time : N.A Think Time : N.A Minimum Instruction Time : 0**

**Correct Marks : 5 Wrong Marks : 1**

**Question Key Details :**

Key	Value
Comprehension	Comp2

ਗੋਰਵ ਇੱਕ ਇਵੈਂਟ ਪ੍ਰਬੰਧਨ ਕੰਪਨੀ " ਲੋਟਸ ਲਿਮਿਟੇਡ " ਦੇ ਮਾਲਕ ਹਨ। ਉਹ ਵਿਆਹ, ਸਮਾਰੋਹ ਅਤੇ ਕਾਂਫਰੇਂਸਾਂ ਦਾ ਆਯੋਜਨ ਕਰਨ ਨਾਲ ਸੰਬੰਧਤ ਸਨ। ਇਹ ਇਵੈਂਟਸ ਵਿਭਿੰਨ ਕਿਰਿਆਵਾਂ, ਸੰਗੀਤ, ਭੋਜਨ ਅਤੇ ਮਨੋਰੰਜਨ ਨਾਲ ਭਰਪੂਰ ਸਨ। ਗੋਰਵ ਸਮਗਰੀ, ਖਾਣੇ ਅਤੇ ਮਨੋਰੰਜਨ ਲਈ ਬਾਹਰਲੇ ਸਰੋਤਾਂ ਤੋਂ ਨਿਰਭਰ ਰਹਿੰਦਾ ਸੀ।

ਮਿਸ ਗੀਤਿਕਾ ਮਾਈਲਸ ਲਿਮਿਟੇਡ ਦੇ ਮਾਲਕ ਹਨ ਜੋ ਮੁੰਬਈ ਵਿੱਚ ਸਥਾਪਿਤ ਇੱਕ ਕੈਟਰਿੰਗ ਅਤੇ ਸਜਾਵਟ ਸੰਬੰਧੀ ਕੰਪਨੀ ਹੈ। ਉਹ ਪਰਿਵਾਰਕ ਅਤੇ ਵਪਾਰ ਸਮਾਰੋਹ ਵਿੱਚ ਭੋਜਨ ਦੀ ਵਿਵਸਥਾ ਕਰਨ ਦਾ ਕਾਰਜ ਕਰਦੀ ਸੀ।

ਗੋਰਵ ਅਤੇ ਗੀਤਿਕਾ covid-19 ਦੇ ਕਾਲ ਤੋਂ ਪਹਿਲਾਂ ਆਪਣੇ ਆਪਣੇ ਖੇਤਰਾਂ ਵਿੱਚ ਵਧੀਆ ਕੰਮ ਕਰ ਰਹੇ ਸਨ। ਪਰ ਬਾਅਦ ਵਿੱਚ ਮੰਗ ਦੀ ਕਮੀ ਕਰਕੇ ਦੋਨੋਂ ਖੇਤਰ ਹਾਨੀ ਦਾ ਸਾਹਮਣਾ ਕਰਦੇ ਪਏ ਸਨ। ਜਿਵੇਂ ਹੀ ਲਾਕ-ਡਾਊਨ ਦੀਆਂ ਪਾਬੰਦੀਆਂ ਨੂੰ ਹਟਾਇਆ ਗਿਆ, ਇੱਕ ਸਾਲ ਬਾਅਦ, ਦੋਵੇਂ, ਗੋਰਵ ਅਤੇ ਗੀਤਿਕਾ, ਉਤਪਾਦਨ ਦੀ ਉੱਚੀ ਲਾਗਤ ਅਤੇ ਘੱਟ ਗਾਹਕਾਂ ਦੀ ਸਮੱਸਿਆਵਾਂ ਤੋਂ ਜੂਝ ਰਹੇ ਸਨ। ਜਦੋਂ ਉਹ ਬਿਹਤਰ ਵਪਾਰਕ ਅਵਸਰ ਦੀ ਭਾਲ ਕਰ ਰਹੇ ਸਨ ਉਹ ਇੱਕ ਦੂਸਰੇ ਨਾਲ ਮਿਲੇ। ਉਹ ਮੁੰਬਈ ਦੇ bkc ਗਰਾਂਊਡ ਵਿੱਚ ਇੱਕ ਸੰਗਠਿਤ ਸਮਾਰੋਹ " exponential " ਵਿੱਚ ਮਿਲੇ।

" exponential " ਵਿੱਚੋਂ ਅਲਗ ਅਲਗ ਵਪਾਰੀ ਸਨ ਜੋ ਵਪਾਰ ਸੰਬੰਧੀ ਵਿਚਾਰਾਂ ਨੂੰ ਸਾਂਝਾ ਕਰ ਰਹੇ ਸਨ। ਇਸ ਤੋਂ ਬਾਅਦ ਗੋਰਵ ਅਤੇ ਗੀਤਿਕਾ ਨੇ ਆਪਣੇ ਵਪਾਰ ਨੂੰ ਮਿਲਾ ਕੇ ਮੁੜ ਸ਼ੁਰੂ ਕਰਨ ਦਾ ਵਿਚਾਰ ਕੀਤਾ। ਨਵੀਂ ਕੰਪਨੀ ਦਾ ਨਾਂ G ਲੋਟਸ ਮਿਲਜ਼ ਲਿਮ: ਰੱਖਿਆ। ਉਹਨਾਂ ਨੇ ਆਪਣੇ ਵਿਕਰੇਤਾਵਾਂ ਅਤੇ ਖਰੀਦਾਰਾਂ ਦੀ ਜਾਣਕਾਰੀ ਸਾਂਝੀ ਕੀਤੀ ਅਤੇ ਆਰਡਰ, ਖਾਣਾ, ਸਜਾਵਟ, ਮਨੋਰੰਜਨ ਦਾ ਪ੍ਰਬੰਧ ਕਰਨ ਲਗੇ। ਉਹਨਾਂ ਦਾ ਵਪਾਰ ਪ੍ਰਫੁੱਲਤ ਹੋਣ ਲਗਾ ਕਿਉਂਕਿ ਲਾਗਤ ਘੱਟ ਸੀ ਅਤੇ ਉਪਭੋਕਤਾ ਦੀ ਮੰਗ ਵੱਧ ਰਹੀ ਸੀ।

ਅੱਜ ਦੇ ਸਾਲ ਹੋ ਗਏ ਹਨ ਅਤੇ ਉਹਨਾਂ ਨੇ  $G^2$  ਲੋਟਸ ਕੰਪਨੀ ਦੇ ਨਾਂ ਨਾਲ ਆਪਣੇ ਵਪਾਰ ਨੂੰ ਮਹਾਂਰਾਸ਼ਟਰਾਂ ਕਈ ਹੋਰ ਸ਼ਹਿਰਾਂ ਵਿੱਚ ਸਥਾਪਿਤ ਕੀਤਾ ਹੈ ਜਿਵੇਂ ਪੂਨਾ, ਅਹਿਮਦ ਨਗਰ, ਨਾਗਪੁਰ ਆਦਿ। ਕੰਪਨੀ ਦੀ ਸਲਾਨਾ ਆਮਦਨ ਵਿੱਚ 30% ਦਾ ਵਾਧਾ ਹੋਇਆ।

ਅਗਰ ਗੋਰਵ ਲੋੜੀਂਦੇ ਪੈਸੇ ਦੀ ਵਿਵਸਥਾ ਕਰਕੇ ਮਾਈਲਜ਼ ਲਿਮ: ਨੂੰ ਖਰੀਦ ਲਵੇ ਫਿਰ ਇਸ ਪ੍ਰਾਪਤੀ ਨੂੰ \_\_\_\_\_ ਆਖਦੇ ਹਨ?

1. ਮਿੱਤਰਤਾ ਪੂਰਨ ਪ੍ਰਾਪਤੀ
2. ਰਿਵਰਸ ਪ੍ਰਾਪਤੀ
3. ਬੈਕ-ਫੱਲਿਪ ਪ੍ਰਾਪਤੀ
4. ਵਿਰੋਧੀ ਦੀ ਪ੍ਰਾਪਤੀ

#### Options :

485584134057. 1
485584134058. 2
485584134059. 3
485584134060. 4

## Geography

Group Number :	7
Group Id :	485584745
Group Maximum Duration :	45
Group Minimum Duration :	45
Show Attended Group? :	No
Edit Attended Group? :	No
Break time :	0
Group Marks :	200
Is this Group for Examiner? :	No
Examiner permission :	Cant View
Show Progress Bar? :	No



## Geography

Section Id :	485584859
Section Number :	1
Section type :	Online
Mandatory or Optional :	Mandatory
Number of Questions :	50
Number of Questions to be attempted :	40
Section Marks :	200
Enable Mark as Answered Mark for Review and Clear Response :	Yes
Maximum Instruction Time :	0
Sub-Section Number :	1
Sub-Section Id :	4855842425
Question Shuffling Allowed :	Yes
Is Section Default? :	null

**Question Number : 101 Question Id : 48558433216 Question Type : MCQ Option Shuffling : No Is Question Mandatory : No Calculator : None Response Time : N.A Think Time : N.A Minimum Instruction Time : 0 Correct Marks : 5 Wrong Marks : 1**

**Question Key Details :**

Key	Value
Comprehension	MCQ

"Human Geography is the synthetic study of relationship between human societies and earth's surface" among the following who gave the above definition on Human Geography.

1. Paul Vidal de la Blache
2. Ellen C Semple
3. Ratzel
4. Ralph W. Emerson

**Options :**

- 485584132861. 1
- 485584132862. 2
- 485584132863. 3
- 485584132864. 4

**Question Number : 102 Question Id : 48558433217 Question Type : MCQ Option Shuffling : No Is Question Mandatory : No Calculator : None Response Time : N.A Think Time : N.A Minimum Instruction Time : 0 Correct Marks : 5 Wrong Marks : 1**

**Question Key Details :**

Key	Value
Comprehension	MCQ

Which one of the following is the name of Ethiopian capital?

1. Al Qahirah
2. Tehran
3. Canberra
4. Addis Ababa

**Options :**

485584132865. 1  
485584132866. 2  
485584132867. 3  
485584132868. 4

**Question Number : 103 Question Id : 48558433218 Question Type : MCQ Option Shuffling : No Is Question Mandatory : No Calculator : None Response Time : N.A Think Time : N.A Minimum Instruction Time : 0**

**Correct Marks : 5 Wrong Marks : 1**

**Question Key Details :**

Key	Value
Comprehension	MCQ

What is the percentage of world population living in urban areas in 2017?

1. 37%
2. 48%
3. 58%
4. 54%

**Options :**

485584132869. 1  
485584132870. 2  
485584132871. 3  
485584132872. 4

**Question Number : 104 Question Id : 48558433219 Question Type : MCQ Option Shuffling : No Is Question Mandatory : No Calculator : None Response Time : N.A Think Time : N.A Minimum Instruction Time : 0**

**Correct Marks : 5 Wrong Marks : 1**

**Question Key Details :**

Key	Value
Comprehension	MCQ

Which one of the following is not the approach of human Geography?

1. Regional Analysis
2. Areal Differentiation
3. Technological Analysis
4. Post-Modernism

**Options :**

- 485584132873. 1
- 485584132874. 2
- 485584132875. 3
- 485584132876. 4

**Question Number : 105 Question Id : 48558433220 Question Type : MCQ Option Shuffling : No Is Question Mandatory : No Calculator : None Response Time : N.A Think Time : N.A Minimum Instruction Time : 0**

**Correct Marks : 5 Wrong Marks : 1**

**Question Key Details :**

Key	Value
Comprehension	MCQ

Who introduced stop and go determinism?

1. Ratzal
2. Ellian sample
3. Griffith Taylor
4. Paul Vidal de la Blache

**Options :**

- 485584132877. 1
- 485584132878. 2
- 485584132879. 3
- 485584132880. 4

**Question Number : 106 Question Id : 48558433221 Question Type : MCQ Option Shuffling : No Is Question Mandatory : No Calculator : None Response Time : N.A Think Time : N.A Minimum Instruction Time : 0**

**Correct Marks : 5 Wrong Marks : 1**

**Question Key Details :**

Key	Value
Comprehension	MCQ

"This happens when the birth rate is more than the death rate between two points of time" choose the right from the following.

1. Stationary Population
2. Actual Growth of Population
3. Negative Growth of Population
4. Positive Growth of Population

**Options :**

- 485584132881. 1
- 485584132882. 2
- 485584132883. 3
- 485584132884. 4

**Question Number : 107 Question Id : 48558433222 Question Type : MCQ Option Shuffling : No Is Question Mandatory : No Calculator : None Response Time : N.A Think Time : N.A Minimum Instruction Time : 0**

**Correct Marks : 5 Wrong Marks : 1**

**Question Key Details :**

Key	Value
Comprehension	MCQ

The 'Alaskan Highway' links which of the following?

1. British Colombia to St. John city
2. Edmonton to Anchorage
3. Darwin to Malborne
4. Algiers to Conakry

**Options :**

- 485584132885. 1
- 485584132886. 2
- 485584132887. 3
- 485584132888. 4

**Question Number : 108 Question Id : 48558433223 Question Type : MCQ Option Shuffling : No Is Question Mandatory : No Calculator : None Response Time : N.A Think Time : N.A Minimum Instruction Time : 0**

**Correct Marks : 5 Wrong Marks : 1**

**Question Key Details :**

Key	Value
Comprehension	MCQ

When and by whom Human development index was created?

1. Prof A. Shaws (1991)
2. Prof Amartya Sen, 1990
3. Dr. Mahbub-Ul-Haq, 1990
4. Prof Amartya Sen 1991

**Options :**

- 485584132889. 1
- 485584132890. 2
- 485584132891. 3
- 485584132892. 4

**Question Number : 109 Question Id : 48558433224 Question Type : MCQ Option Shuffling : No Is Question Mandatory : No Calculator : None Response Time : N.A Think Time : N.A Minimum Instruction Time : 0**

**Correct Marks : 5 Wrong Marks : 1**

**Question Key Details :**

Key	Value
Comprehension	MCQ

Famous pipeline 'Big Inch' is located in \_\_\_\_\_.

1. Saudi Arabia
2. Qutar
3. USA
4. Venezuela

**Options :**

- 485584132893. 1
- 485584132894. 2
- 485584132895. 3
- 485584132896. 4

**Question Number : 110 Question Id : 48558433225 Question Type : MCQ Option Shuffling : No Is Question Mandatory : No Calculator : None Response Time : N.A Think Time : N.A Minimum Instruction Time : 0**

**Correct Marks : 5 Wrong Marks : 1**

**Question Key Details :**

Key	Value
Comprehension	MCQ

How many of the following cities in world have attained the million status at the beginning of 2005.

1. 206
2. 437
3. 469
4. 438

**Options :**

- 485584132897. 1
- 485584132898. 2
- 485584132899. 3
- 485584132900. 4

**Question Number : 111 Question Id : 48558433226 Question Type : MCQ Option Shuffling : No Is Question Mandatory : No Calculator : None Response Time : N.A Think Time : N.A Minimum Instruction Time : 0**

**Correct Marks : 5 Wrong Marks : 1**

**Question Key Details :**

Key	Value
Comprehension	MCQ

Which among the following is not a factor that discourage women to migrate from rural to urban areas?

1. Shortage of housing
2. Paucity of job opportunities
3. Low cost of living
4. Lack of security in cities

**Options :**

- 485584132901. 1
- 485584132902. 2
- 485584132903. 3
- 485584132904. 4

**Question Number : 112 Question Id : 48558433227 Question Type : MCQ Option Shuffling : No Is Question Mandatory : No Calculator : None Response Time : N.A Think Time : N.A Minimum Instruction Time : 0**

**Correct Marks : 5 Wrong Marks : 1**

**Question Key Details :**

Key	Value
Comprehension	MCQ

In the Age sex pyramid a narrow base and a tapered top represents which of the following?

1. Declining Population Pyramid
2. Constant Population Pyramid
3. Expanding Population Pyramid
4. Triangular Shaped Pyramid

**Options :**

- 485584132905. 1
- 485584132906. 2
- 485584132907. 3
- 485584132908. 4

**Question Number : 113 Question Id : 48558433228 Question Type : MCQ Option Shuffling : No Is Question Mandatory : No Calculator : None Response Time : N.A Think Time : N.A Minimum Instruction Time : 0**

**Correct Marks : 5 Wrong Marks : 1**

**Question Key Details :**

Key	Value
Comprehension	MCQ

Which one of the following states of India has the highest female literacy?

1. Tamil Nadu
2. Punjab
3. Haryana
4. Kerala

**Options :**

- 485584132909. 1
- 485584132910. 2
- 485584132911. 3
- 485584132912. 4

**Question Number : 114 Question Id : 48558433229 Question Type : MCQ Option Shuffling : No Is Question Mandatory : No Calculator : None Response Time : N.A Think Time : N.A Minimum Instruction Time : 0**

**Correct Marks : 5 Wrong Marks : 1**

**Question Key Details :**

Key	Value
Comprehension	MCQ

The first complete census was conducted in India in which year ?

1. 1861
2. 1871
3. 1881
4. 1891

**Options :**

485584132913. 1  
485584132914. 2  
485584132915. 3  
485584132916. 4

**Question Number : 115 Question Id : 48558433230 Question Type : MCQ Option Shuffling : No Is Question Mandatory : No Calculator : None Response Time : N.A Think Time : N.A Minimum Instruction Time : 0**

**Correct Marks : 5 Wrong Marks : 1**

**Question Key Details :**

Key	Value
Comprehension	MCQ

How many Railway Zones are there in India?

1. 12
2. 14
3. 15
4. 16

**Options :**

485584132917. 1  
485584132918. 2  
485584132919. 3  
485584132920. 4

**Question Number : 116 Question Id : 48558433231 Question Type : MCQ Option Shuffling : No Is Question Mandatory : No Calculator : None Response Time : N.A Think Time : N.A Minimum Instruction Time : 0**

**Correct Marks : 5 Wrong Marks : 1**

**Question Key Details :**

Key	Value
Comprehension	MCQ



According to Grierson (Linguistic Survey of India 1903-1928) how many languages were there in India?

1. 544
2. 22
3. 179
4. 267

**Options :**

485584132921. 1  
485584132922. 2  
485584132923. 3  
485584132924. 4

**Question Number : 117 Question Id : 48558433232 Question Type : MCQ Option Shuffling : No Is Question Mandatory : No Calculator : None Response Time : N.A Think Time : N.A Minimum Instruction Time : 0**

**Correct Marks : 5 Wrong Marks : 1**

**Question Key Details :**

Key	Value
Comprehension	MCQ

Which phase is referred to as the period of population explosion in India?

1. Phase I (1901-1921)
2. Phase II (1921-1951)
3. Phase III (1951-1981)
4. Phase IV (Post 1981 till present)

**Options :**

485584132925. 1  
485584132926. 2  
485584132927. 3  
485584132928. 4

**Question Number : 118 Question Id : 48558433233 Question Type : MCQ Option Shuffling : No Is Question Mandatory : No Calculator : None Response Time : N.A Think Time : N.A Minimum Instruction Time : 0**

**Correct Marks : 5 Wrong Marks : 1**

**Question Key Details :**

Key	Value
Comprehension	MCQ

Which one of the following town / cities has not been developed as an administrative headquarters after Independence?

1. Jamshedpur
2. Chandigarh
3. Gandhinagar
4. Dispur

**Options :**

485584132929. 1  
485584132930. 2  
485584132931. 3  
485584132932. 4

**Question Number : 119 Question Id : 48558433234 Question Type : MCQ Option Shuffling : No Is Question Mandatory : No Calculator : None Response Time : N.A Think Time : N.A Minimum Instruction Time : 0**

**Correct Marks : 5 Wrong Marks : 1**

**Question Key Details :**

Key	Value
Comprehension	MCQ

The famous Nehru Trophy Boat Race (Vallamkali) is held in the backwater of which of the following?

1. Andhra Pradesh
2. Goa
3. Karnataka
4. Kerala

**Options :**

485584132933. 1  
485584132934. 2  
485584132935. 3  
485584132936. 4

**Question Number : 120 Question Id : 48558433235 Question Type : MCQ Option Shuffling : No Is Question Mandatory : No Calculator : None Response Time : N.A Think Time : N.A Minimum Instruction Time : 0**

**Correct Marks : 5 Wrong Marks : 1**

**Question Key Details :**

Key	Value
Comprehension	MCQ

Which one among the following classes comprises the maximum number of town / cities in India as per Census of India 2011?

1. Class II
2. Class III
3. Class IV
4. Class V

**Options :**

485584132937. 1  
485584132938. 2  
485584132939. 3  
485584132940. 4

**Question Number : 121 Question Id : 48558433236 Question Type : MCQ Option Shuffling : No Is Question Mandatory : No Calculator : None Response Time : N.A Think Time : N.A Minimum Instruction Time : 0**

**Correct Marks : 5 Wrong Marks : 1**

**Question Key Details :**

Key	Value
Comprehension	MCQ

Which one of the following is an example of Ancient Town in India?

1. Prayag
2. Hyderabad
3. Delhi
4. Mumbai

**Options :**

485584132941. 1  
485584132942. 2  
485584132943. 3  
485584132944. 4

**Question Number : 122 Question Id : 48558433237 Question Type : MCQ Option Shuffling : No Is Question Mandatory : No Calculator : None Response Time : N.A Think Time : N.A Minimum Instruction Time : 0**

**Correct Marks : 5 Wrong Marks : 1**

**Question Key Details :**

Key	Value
Comprehension	MCQ

Which of the following Indian state has the highest density of population?

1. Bihar
2. Kerala
3. Uttar Pradesh
4. West Bengal

**Options :**

485584132945. 1  
485584132946. 2  
485584132947. 3  
485584132948. 4

**Question Number : 123 Question Id : 48558433238 Question Type : MCQ Option Shuffling : No Is Question Mandatory : No Calculator : None Response Time : N.A Think Time : N.A Minimum Instruction Time : 0**

**Correct Marks : 5 Wrong Marks : 1**

**Question Key Details :**

Key	Value
Comprehension	MCQ

The Ocean noise levels in 2003-04 were about \_\_\_\_\_ higher than in 1964-1966.

1. 20 decibels
2. 10-12 decibels
3. 5 decibels
4. 15-18 decibels

**Options :**

485584132949. 1  
485584132950. 2  
485584132951. 3  
485584132952. 4

**Question Number : 124 Question Id : 48558433239 Question Type : MCQ Option Shuffling : No Is Question Mandatory : No Calculator : None Response Time : N.A Think Time : N.A Minimum Instruction Time : 0**

**Correct Marks : 5 Wrong Marks : 1**

**Question Key Details :**

Key	Value
Comprehension	MCQ

Which one of the following contributes to the maximum length of the roads in India?

1. National Highway
2. State Highway
3. Districts Roads
4. Rural Roads

**Options :**

485584132953. 1  
485584132954. 2  
485584132955. 3  
485584132956. 4

**Question Number : 125 Question Id : 48558433240 Question Type : MCQ Option Shuffling : No Is Question Mandatory : No Calculator : None Response Time : N.A Think Time : N.A Minimum Instruction Time : 0**

**Correct Marks : 5 Wrong Marks : 1**

**Question Key Details :**

Key	Value
Comprehension	MCQ

Which one of the following is an Inland Port?

1. Kochhi Port
2. Ennore Port
3. Kolkata Port
4. Haldia Port

**Options :**

485584132957. 1  
485584132958. 2  
485584132959. 3  
485584132960. 4

**Question Number : 126 Question Id : 48558433241 Question Type : MCQ Option Shuffling : No Is Question Mandatory : No Calculator : None Response Time : N.A Think Time : N.A Minimum Instruction Time : 0**

**Correct Marks : 5 Wrong Marks : 1**

**Question Key Details :**

Key	Value
Comprehension	MCQ

Arrange the following approaches in the order?

- A. Spatial organization
- B. Exploration and description
- C. Post modernism in geography
- D. Regional Analysis

Choose the correct answer from the options given below:

- 1. A, C, B, D
- 2. B, D, A, C
- 3. C, D, B, A
- 4. D, A, C, B

**Options :**

- 485584132961. 1
- 485584132962. 2
- 485584132963. 3
- 485584132964. 4

**Question Number : 127 Question Id : 48558433242 Question Type : MCQ Option Shuffling : No Is Question Mandatory : No Calculator : None Response Time : N.A Think Time : N.A Minimum Instruction Time : 0**

**Correct Marks : 5 Wrong Marks : 1**

**Question Key Details :**

Key	Value
Comprehension	MCQ

Arrange the following continents in descending order of population density

- A. North America
- B. Africa
- C. Oceania
- D. Asia

Choose the correct answer from the options given below:

- 1. D, B, A, C
- 2. D, C, B, A
- 3. D, A, B, C
- 4. D, A, C, B

**Options :**

- 485584132965. 1
- 485584132966. 2
- 485584132967. 3
- 485584132968. 4

**Question Number : 128 Question Id : 48558433243 Question Type : MCQ Option Shuffling : No Is Question Mandatory : No Calculator : None Response Time : N.A Think Time : N.A Minimum Instruction Time : 0**

**Correct Marks : 5 Wrong Marks : 1**

**Question Key Details :**

Key	Value
Comprehension	MCQ

Arrange the below mentioned Urban classification in correct sequence (small to large).

- A. City
- B. Conurbation
- C. Megalopolis
- D. Million City

Choose the correct answer from the options given below:

- 1. A, B, C, D
- 2. A, D, B, C
- 3. A, C, B, D
- 4. C, B, D, A

**Options :**

- 485584132969. 1
- 485584132970. 2
- 485584132971. 3
- 485584132972. 4

**Question Number : 129 Question Id : 48558433244 Question Type : MCQ Option Shuffling : No Is Question Mandatory : No Calculator : None Response Time : N.A Think Time : N.A Minimum Instruction Time : 0**

**Correct Marks : 5 Wrong Marks : 1**

**Question Key Details :**

Key	Value
Comprehension	MCQ

Arrange the below mentioned technology phases with population growth periods in correct order from birth of Christ to Present.

- A. Biotechnology
- B. Age of European exploration and colonization
- C. Information and computers
- D. Transportation development

Choose the correct answer from the options given below:

- 1. B, D, A, C
- 2. B, D, C, A
- 3. B, C, D, A
- 4. B, A, D, C

**Options :**

- 485584132973. 1
- 485584132974. 2
- 485584132975. 3
- 485584132976. 4

**Question Number : 130 Question Id : 48558433245 Question Type : MCQ Option Shuffling : No Is Question Mandatory : No Calculator : None Response Time : N.A Think Time : N.A Minimum Instruction Time : 0**

**Correct Marks : 5 Wrong Marks : 1**

**Question Key Details :**

Key	Value
Comprehension	MCQ

Arrange the following airports of India from east to west.

- A. Shillong
- B. Allahabad
- C. Udaipur
- D. Patna

Choose the correct answer from the options given below:

- 1. A, D, B, C
- 2. A, D, C, B
- 3. D, A, C, B
- 4. D, A, B, C

**Options :**

- 485584132977. 1
- 485584132978. 2
- 485584132979. 3
- 485584132980. 4

**Question Number : 131 Question Id : 48558433246 Question Type : MCQ Option Shuffling : No Is Question Mandatory : No Calculator : None Response Time : N.A Think Time : N.A Minimum Instruction Time : 0**

**Correct Marks : 5 Wrong Marks : 1**

**Question Key Details :**

Key	Value
Comprehension	MCQ



Choose indicators used to assess Human Development Index from below.

- A. Purchasing Power
- B. Happiness
- C. Life expectancy at Birth
- D. Gross Enrollment Ratio

Choose the correct answer from the options given below:

1. A, B, D only
2. A, C, D only
3. B, C, D only
4. B, A, C only

**Options :**

- 485584132981. 1
- 485584132982. 2
- 485584132983. 3
- 485584132984. 4

**Question Number : 132 Question Id : 48558433247 Question Type : MCQ Option Shuffling : No Is Question Mandatory : No Calculator : None Response Time : N.A Think Time : N.A Minimum Instruction Time : 0**

**Correct Marks : 5 Wrong Marks : 1**

**Question Key Details :**

Key	Value
Comprehension	MCQ

Major areas of rice production are:

- A. Bihar
- B. Karnataka
- C. West Bengal
- D. Chhattisgarh

Choose the correct answer from the options given below:

1. A, B and D only
2. B, C and D only
3. A, C and D only
4. A, B and C only

**Options :**

- 485584132985. 1
- 485584132986. 2
- 485584132987. 3
- 485584132988. 4

**Question Number : 133 Question Id : 48558433248 Question Type : MCQ Option Shuffling : No Is Question Mandatory : No Calculator : None Response Time : N.A Think Time : N.A Minimum Instruction Time : 0**

**Correct Marks : 5 Wrong Marks : 1**

**Question Key Details :**

Key	Value
Comprehension	MCQ

Read the following about Indira Gandhi Canal Command Area carefully.

- A. Indira Gandhi Canal was previously known as the Rajasthan Canal.
- B. The Canal Project was launched on 31 March ,1948.
- C. The Canal originates at Herike barrage in Punjab.
- D. They command area of stage-I lies in Ganganagar, Hanumangarh and northern part of Bikaner districts.

Choose the correct answer from the options given below:

- 1. A, B and C only
- 2. A, B and D only
- 3. A, C and D only
- 4. B, C and D only

**Options :**

- 485584132989. 1
- 485584132990. 2
- 485584132991. 3
- 485584132992. 4

**Question Number : 134 Question Id : 48558433249 Question Type : MCQ Option Shuffling : No Is Question Mandatory : No Calculator : None Response Time : N.A Think Time : N.A Minimum Instruction Time : 0**

**Correct Marks : 5 Wrong Marks : 1**

**Question Key Details :**

Key	Value
Comprehension	MCQ

Read the following statements about the North Western region of India carefully.

- A. Rajasthan is rich in building stones i.e. sandstone, granite, marble.
- B. Gujarat does not have petroleum deposits.
- C. Gujarat and Rajasthan both have rich source of salt
- D. This region provide raw material for Cement Industry

Choose the correct answer from the options given below:

- 1. A, B and C only
- 2. A, B and D only
- 3. A, C and D only
- 4. B, C and D only

**Options :**

485584132993. 1  
485584132994. 2  
485584132995. 3  
485584132996. 4

**Question Number : 135 Question Id : 48558433250 Question Type : MCQ Option Shuffling : No Is Question Mandatory : No Calculator : None Response Time : N.A Think Time : N.A Minimum Instruction Time : 0**

**Correct Marks : 5 Wrong Marks : 1**

**Question Key Details :**

Key	Value
Comprehension	MCQ

Which are the characteristics of Mechanised grain farming?

- A. It is practised in the semi-arid land of mid-latitudes.
- B. The size of the farm is too large.
- C. Variety of crops are grown with livestock.
- D. Entire operations of cultivation are mechanised.

Choose the correct answer from the options given below:

- 1. B, C and D only
- 2. A, B and D only
- 3. A, C and D only
- 4. A, B and C only

**Options :**

485584132997. 1  
485584132998. 2  
485584132999. 3  
485584133000. 4

**Question Number : 136 Question Id : 48558433251 Question Type : MCQ Option Shuffling : No Is Question Mandatory : No Calculator : None Response Time : N.A Think Time : N.A Minimum Instruction Time : 0**

**Correct Marks : 5 Wrong Marks : 1**

**Question Key Details :**

Key	Value
Comprehension	MCQ

Match List I with List II

LIST I (Country)		LIST II (Mega city)	
A.	Peru	I.	Jakarta
B.	Indonesia	II.	Manila
C.	Brazil	III.	Lima
D.	Philippines	IV.	Sao Paulo

Choose the correct answer from the options given below:

1. A-III, B-II, C-II, D-IV
2. A-III, B-I, C-IV, D-II
3. A-IV, B-II, C-I, D-III
4. A-IV, B-III, C-II, D-I

**Options :**

485584133001. 1  
485584133002. 2  
485584133003. 3  
485584133004. 4

**Question Number : 137 Question Id : 48558433252 Question Type : MCQ Option Shuffling : No Is Question Mandatory : No Calculator : None Response Time : N.A Think Time : N.A Minimum Instruction Time : 0**

**Correct Marks : 5 Wrong Marks : 1**

**Question Key Details :**

Key	Value
Comprehension	MCQ

Match List I with List II

LIST I Pollution		LIST II Sources of pollution	
A.	Air pollution	I.	Urban run-off
B.	Water pollution	II.	Advertising media
C.	Land pollution	III.	Combustion of biofuels
D.	Noise pollution	IV.	Improper human activities

Choose the correct answer from the options given below:

1. A-IV, B-I, C-II, D-III
2. A-IV, B-II, C-III, D-I
3. A-III, B-I, C-IV, D-II
4. A-III, B-II, C-I, D-IV

**Options :**

485584133005. 1  
485584133006. 2  
485584133007. 3  
485584133008. 4

**Question Number : 138 Question Id : 48558433253 Question Type : MCQ Option Shuffling : No Is Question Mandatory : No Calculator : None Response Time : N.A Think Time : N.A Minimum Instruction Time : 0**

**Correct Marks : 5 Wrong Marks : 1**

**Question Key Details :**

Key	Value
Comprehension	MCQ

Match List I with List II

LIST I States		LIST II Ports	
A.	Gujarat	I.	Mangaluru
B.	Maharashtra	II.	Kandla
C.	Karnataka	III.	Kochchi
D.	Kerala	IV.	Jawaharlal Nehru Port

Choose the correct answer from the options given below:

1. A-II, B-I, C-III, D-IV
2. A-II, B-IV, C-I, D-III
3. A-II, B-IV, C-III, D-I
4. A-IV, B-II, C-I, D-III

**Options :**

- 485584133009. 1
- 485584133010. 2
- 485584133011. 3
- 485584133012. 4

**Question Number : 139 Question Id : 48558433254 Question Type : MCQ Option Shuffling : No Is Question Mandatory : No Calculator : None Response Time : N.A Think Time : N.A Minimum Instruction Time : 0**

**Correct Marks : 5 Wrong Marks : 1**

**Question Key Details :**

Key	Value
Comprehension	MCQ

Match List I with List II

LIST I (Mining area)		LIST II (State)	
A.	kendujhar	I.	Maharashtra
B.	Ratnagiri	II.	Madhya Pradesh
C.	katni	III.	Rajasthan
D.	khetri	IV.	Odisha

Choose the correct answer from the options given below:

1. A-II, B-I, C-IV, D-III
2. A-IV, B-I, C-II, D-III
3. A-IV, B-II, C-III, D-I
4. A-II, B-III, C-IV, D-I

**Options :**

485584133013. 1  
485584133014. 2  
485584133015. 3  
485584133016. 4

**Question Number : 140 Question Id : 48558433255 Question Type : MCQ Option Shuffling : No Is Question Mandatory : No Calculator : None Response Time : N.A Think Time : N.A Minimum Instruction Time : 0**

**Correct Marks : 5 Wrong Marks : 1**

**Question Key Details :**

Key	Value
Comprehension	MCQ

Match List I with List II

LIST I Specialised functions		LIST II Port	
A.	Ports of Call	I.	Copenhagen
B.	Packet Station	II.	Kochi
C.	Entrepot Ports	III.	Aden
D.	Navel Ports	IV.	Dover

Choose the correct answer from the options given below:

1. A-III, B-IV, C-I, D-II
2. A-II, B-III, C-IV, D-I
3. A-I, B-II, C-III, D-IV
4. A-IV, B-I, C-II, D-III

**Options :**

485584133017. 1

485584133018. 2  
485584133019. 3  
485584133020. 4

**Sub-Section Number :** 2  
**Sub-Section Id :** 4855842426  
**Question Shuffling Allowed :** No  
**Is Section Default? :** null

**Question Number : 141 Question Id : 48558433256 Question Type : MCQ Option Shuffling : No Is Question Mandatory : No Calculator : None Response Time : N.A Think Time : N.A Minimum Instruction Time : 0**

**Correct Marks : 5 Wrong Marks : 1**

**Question Key Details :**

Key	Value
Comprehension	Comp1

Read the passage and answer 5 questions that follow:

High technology, or simply high-tech, is the latest generation of manufacturing activities. It is best understood as the application of intensive research and development (R and D) efforts leading to the manufacture of products of an advanced scientific and engineering character. Professional (white collar) workers make up a large share of the total workforce. These highly skilled specialists greatly outnumber the actual production (blue collar) workers. Robotics on the assembly line, computer-aided design (CAD) and manufacturing, electronic controls of smelting and refining processes, and the constant development of new chemical and pharmaceutical products are notable examples of a high-tech industry.

Neatly spaced, low, modern, dispersed, office-plant-lab buildings rather than massive assembly structures, factories and storage areas mark the-tech industrial landscape. Planned business parks for high-tech start-ups have become part of regional and local development schemes.

High-tech industries which are regionally concentrated, self-sustained and highly specialised are called technopolies. The Silicon Valley near San Francisco and Silicon Forest near Seattle are examples of technopolies.

Manufacturing contributes significantly to the world economy. Iron and steel, textiles, automobiles, petrochemicals and electronics are some of the world's most important manufacturing industries.

Which one of the following is not true about High-Tech industry?

1. High-Tech is latest manufacturing Industry
2. It is intensive research and development unit
3. It is traditionally located close to the raw materials
4. Absence of massive statements, factories, storage etc.

**Options :**

485584133021. 1  
485584133022. 2  
485584133023. 3  
485584133024. 4

**Question Number : 142 Question Id : 48558433257 Question Type : MCQ Option Shuffling : No Is Question Mandatory : No Calculator : None Response Time : N.A Think Time : N.A Minimum Instruction Time : 0**

**Correct Marks : 5 Wrong Marks : 1**

**Question Key Details :**

Key	Value
Comprehension	Comp1

Read the passage and answer 5 questions that follow:

High technology, or simply high-tech, is the latest generation of manufacturing activities. It is best understood as the application of intensive research and development (R and D) efforts leading to the manufacture of products of an advanced scientific and engineering character. Professional (white collar) workers make up a large share of the total workforce. These highly skilled specialists greatly outnumber the actual production (blue collar) workers. Robotics on the assembly line, computer-aided design (CAD) and manufacturing, electronic controls of smelting and refining processes, and the constant development of new chemical and pharmaceutical products are notable examples of a high-tech industry.

Neatly spaced, low, modern, dispersed, office-plant-lab buildings rather than massive assembly structures, factories and storage areas mark the-tech industrial landscape. Planned business parks for high-tech start-ups have become part of regional and local development schemes.

High-tech industries which are regionally centred, self-sustained and highly specialised are called technopolies. The Silicon Valley near San Francisco and Silicon Forest near Seattle are examples of technopolies.

Manufacturing contributes significantly to the world economy. Iron and steel, textiles, automobiles, petrochemicals and electronics are some of the world's most important manufacturing industries.

Which one of the following are considered white collar workers?

1. Skilled specialist
2. Engineers
3. Farmers
4. Skilled workers

**Options :**

485584133025. 1  
 485584133026. 2  
 485584133027. 3  
 485584133028. 4

**Question Number : 143 Question Id : 48558433258 Question Type : MCQ Option Shuffling : No Is Question Mandatory : No Calculator : None Response Time : N.A Think Time : N.A Minimum Instruction Time : 0**

**Correct Marks : 5 Wrong Marks : 1**

**Question Key Details :**

Key	Value
Comprehension	Comp1



Read the passage and answer 5 questions that follow:

High technology, or simply high-tech, is the latest generation of manufacturing activities. It is best understood as the application of intensive research and development (R and D) efforts leading to the manufacture of products of an advanced scientific and engineering character. Professional (white collar) workers make up a large share of the total workforce. These highly skilled specialists greatly outnumber the actual production (blue collar) workers. Robotics on the assembly line, computer-aided design (CAD) and manufacturing, electronic controls of smelting and refining processes, and the constant development of new chemical and pharmaceutical products are notable examples of a high-tech industry.

Neatly spaced, low, modern, dispersed, office-plant-lab buildings rather than massive assembly structures, factories and storage areas mark the-tech industrial landscape. Planned business parks for high-tech start-ups have become part of regional and local development schemes.

High-tech industries which are regionally concentrated, self-sustained and highly specialised are called technopolies. The Silicon Valley near San Francisco and Silicon Forest near Seattle are examples of technopolies.

Manufacturing contributes significantly to the world economy. Iron and steel, textiles, automobiles, petrochemicals and electronics are some of the world's most important manufacturing industries.

Which of the following are an example of high-technology industry?

1. Textile production
2. Robotics
3. CAD
4. Pharmaceutical

**Options :**

- 485584133029. 1
- 485584133030. 2
- 485584133031. 3
- 485584133032. 4

**Question Number : 144 Question Id : 48558433259 Question Type : MCQ Option Shuffling : No Is Question Mandatory : No Calculator : None Response Time : N.A Think Time : N.A Minimum Instruction Time : 0**

**Correct Marks : 5 Wrong Marks : 1**

**Question Key Details :**

Key	Value
Comprehension	Comp1

Read the passage and answer 5 questions that follow:

High technology, or simply high-tech, is the latest generation of manufacturing activities. It is best understood as the application of intensive research and development (R and D) efforts leading to the manufacture of products of an advanced scientific and engineering character. Professional (white collar) workers make up a large share of the total workforce. These highly skilled specialists greatly outnumber the actual production (blue collar) workers. Robotics on the assembly line, computer-aided design (CAD) and manufacturing, electronic controls of smelting and refining processes, and the constant development of new chemical and pharmaceutical products are notable examples of a high-tech industry.

Neatly spaced, low, modern, dispersed, office-plant-lab buildings rather than massive assembly structures, factories and storage areas mark the-tech industrial landscape. Planned business parks for high-tech start-ups have become part of regional and local development schemes.

High-tech industries which are regionally concentrated, self-sustained and highly specialised are called technopolies. The Silicon Valley near San Francisco and Silicon Forest near Seattle are examples of technopolies.

Manufacturing contributes significantly to the world economy. Iron and steel, textiles, automobiles, petrochemicals and electronics are some of the world's most important manufacturing industries.

Which of the following term is used for the usually concentrated, self-sustained and specialised industry?

1. Iron & steel Industry
2. Textile industry
3. Automobile industry
4. Technopolies

**Options :**

- 485584133033. 1
- 485584133034. 2
- 485584133035. 3
- 485584133036. 4

**Question Number : 145 Question Id : 48558433260 Question Type : MCQ Option Shuffling : No Is Question Mandatory : No Calculator : None Response Time : N.A Think Time : N.A Minimum Instruction Time : 0**

**Correct Marks : 5 Wrong Marks : 1**

**Question Key Details :**

Key	Value
Comprehension	Comp1

Read the passage and answer 5 questions that follow:

High technology, or simply high-tech, is the latest generation of manufacturing activities. It is best understood as the application of intensive research and development (R and D) efforts leading to the manufacture of products of an advanced scientific and engineering character. Professional (white collar) workers make up a large share of the total workforce. These highly skilled specialists greatly outnumber the actual production (blue collar) workers. Robotics on the assembly line, computer-aided design (CAD) and manufacturing, electronic controls of smelting and refining processes, and the constant development of new chemical and pharmaceutical products are notable examples of a high-tech industry.

Neatly spaced, low, modern, dispersed, office-plant-lab buildings rather than massive assembly structures, factories and storage areas mark the-tech industrial landscape. Planned business parks for high-tech start-ups have become part of regional and local development schemes.

High-tech industries which are regionally concentrated, self-sustained and highly specialised are called technopolies. The Silicon Valley near San Francisco and Silicon Forest near Seattle are examples of techonopolies.

Manufacturing contributes significantly to the world economy. Iron and steel, textiles, automobiles, petrochemicals and electronics are some of the world's most important manufacturing industries.

Which of the following workers are greatly affected by High-Tech Industry?

1. White collar workers
2. Blue collar workers
3. Red collar workers
4. Grey collar workers

**Options :**

- 485584133037. 1
- 485584133038. 2
- 485584133039. 3
- 485584133040. 4

**Sub-Section Number :** 3  
**Sub-Section Id :** 4855842427  
**Question Shuffling Allowed :** No  
**Is Section Default? :** null

**Question Number :** 146 **Question Id :** 48558433261 **Question Type :** MCQ **Option Shuffling :** No **Is Question Mandatory :** No **Calculator :** None **Response Time :** N.A **Think Time :** N.A **Minimum Instruction Time :** 0

**Correct Marks :** 5 **Wrong Marks :** 1

**Question Key Details :**

Key	Value
Comprehension	Comp2

Read the passage and answer 5 questions that follow:

Watershed management basically refers to efficient management and conservation of surface and groundwater resources. It involves prevention of runoff and shortage and recharge of groundwater through various methods like percolation tanks. Recharge wells. Etc. however. In broad sense watershed management includes conservation. Regeneration and judicious use of all resources- natural (like land water plants and animals) and human with in a watershed. Watershed management aims at bringing about balance between natural resources on the one hand and society on the other. The success of watershed development largely depends upon community participation.

The Central and State Government have initiated many watershed development and management programmes in the country. some of these are being implemented by non-government organisations also. Haryali is a watershed development project sponsored by the Central Government which aims at enabling the rural populations to conserve water for drinking, irrigation, fisheries and afforestation. The Project is being executed by Gram Panchayats with people's participation. Neeru-Meeru (water and you) programme (in Andhra Pradesh) and Arvary Pani Sansad (in Alwar Rajasthan) have taken up constructions of various water-harvesting structures such as percolation tanks. Dug out ponds (Johand). Check dams. etc... through people's participation. Tamil Nadu has made water harvesting structures in the houses compulsory. No building can be constructed without making structures for water harvesting.

watershed development projects in some areas have been successful in rejuvenating environment and economy. However. There are only a few success stories. In majority of cases. The programme is still in its nascent stage. There is a need to generate awareness regarding benefits of watershed development and management among people in the country, and through this integrated water resource management approach water availability can be ensured on sustainable basis.

What is watershed?

1. It is efficient management and conservation of surface and groundwater resources.
2. It is a system of equitable distribution of water in an area.
3. It is a method of storing the canal water.
4. It is harvesting of natural streams.

**Options :**

- 485584133041. 1
- 485584133042. 2
- 485584133043. 3
- 485584133044. 4

**Question Number : 147 Question Id : 48558433262 Question Type : MCQ Option Shuffling : No Is Question Mandatory : No Calculator : None Response Time : N.A Think Time : N.A Minimum Instruction Time : 0**

**Correct Marks : 5 Wrong Marks : 1**

**Question Key Details :**

Key	Value
Comprehension	Comp2

Read the passage and answer 5 questions that follow:

Watershed management basically refers to efficient management and conservation of surface and groundwater resources. It involves prevention of runoff and shortage and recharge of groundwater through various methods like percolation tanks. Recharge wells. Etc. however. In broad sense watershed management includes conservation. Regeneration and judicious use of all resources- natural (like land water plants and animals) and human with in a watershed. Watershed management aims at bringing about balance between natural resources on the one hand and society on the other. The success of watershed development largely depends upon community participation.

The Central and State Government have initiated many watershed development and management programmes in the country. some of these are being implemented by non-government organisations also. Haryali is a watershed development project sponsored by the Central Government which aims at enabling the rural populations to conserve water for drinking, irrigation, fisheries and afforestation. The Project is being executed by Gram Panchayats with people's participation. Neeru-Meeru (water and you) programme (in Andhra Pradesh) and Arvary Pani Sansad (in Alwar Rajasthan) have taken up constructions of various water-harvesting structures such as percolation tanks. Dug out ponds (Johand). Check dams. etc... through people's participation. Tamil Nadu has made water harvesting structures in the houses compulsory. No building can be constructed without making structures for water harvesting.

watershed development projects in some areas have been successful in rejuvenating environment and economy. However. There are only a few success stories. In majority of cases. The programme is still in its nascent stage. There is a need to generate awareness regarding benefits of watershed development and management among people in the country, and through this integrated water resource management approach water availability can be ensured on sustainable basis.

Out of which one is the success story of watershed management in India?

1. Ahmednagar, Maharashtra
2. Gandhi Nagar, Gujarat
3. Alwar, Rajasthan
4. Andhra Pradesh

**Options :**

- 485584133045. 1
- 485584133046. 2
- 485584133047. 3
- 485584133048. 4

**Question Number : 148 Question Id : 48558433263 Question Type : MCQ Option Shuffling : No Is Question Mandatory : No Calculator : None Response Time : N.A Think Time : N.A Minimum Instruction Time : 0**

**Correct Marks : 5 Wrong Marks : 1**

**Question Key Details :**

Key	Value
Comprehension	Comp2

Read the passage and answer 5 questions that follow:

Watershed management basically refers to efficient management and conservation of surface and groundwater resources. It involves prevention of runoff and shortage and recharge of groundwater through various methods like percolation tanks. Recharge wells. Etc. however. In broad sense watershed management includes conservation. Regeneration and judicious use of all resources- natural (like land water plants and animals) and human with in a watershed. Watershed management aims at bringing about balance between natural resources on the one hand and society on the other. The success of watershed development largely depends upon community participation.

The Central and State Government have initiated many watershed development and management programmes in the country. some of these are being implemented by non-government organisations also. Haryali is a watershed development project sponsored by the Central Government which aims at enabling the rural populations to conserve water for drinking, irrigation, fisheries and afforestation. The Project is being executed by Gram Panchayats with people's participation. Neeru-Meeru (water and you) programme (in Andhra Pradesh) and Arvary Pani Sansad (in Alwar Rajasthan) have taken up constructions of various water-harvesting structures such as percolation tanks. Dug out ponds (Johand). Check dams. etc... through people's participation. Tamil Nadu has made water harvesting structures in the houses compulsory. No building can be constructed without making structures for water harvesting.

watershed development projects in some areas have been successful in rejuvenating environment and economy. However. There are only a few success stories. In majority of cases. The programme is still in its nascent stage. There is a need to generate awareness regarding benefits of watershed development and management among people in the country, and through this integrated water resource management approach water availability can be ensured on sustainable basis.

Watershed Management largely depends upon the \_\_\_\_\_ .

1. Central and state Government
2. Community Participation
3. Management Programs
4. Development Projects

**Options :**

- 485584133049. 1
- 485584133050. 2
- 485584133051. 3
- 485584133052. 4

**Question Number : 149 Question Id : 48558433264 Question Type : MCQ Option Shuffling : No Is Question Mandatory : No Calculator : None Response Time : N.A Think Time : N.A Minimum Instruction Time : 0**

**Correct Marks : 5 Wrong Marks : 1**

**Question Key Details :**

Key	Value
Comprehension	Comp2

Read the passage and answer 5 questions that follow:

Watershed management basically refers to efficient management and conservation of surface and groundwater resources. It involves prevention of runoff and shortage and recharge of groundwater through various methods like percolation tanks. Recharge wells. Etc. however. In broad sense watershed management includes conservation. Regeneration and judicious use of all resources- natural (like land water plants and animals) and human with in a watershed. Watershed management aims at bringing about balance between natural resources on the one hand and society on the other. The success of watershed development largely depends upon community participation.

The Central and State Government have initiated many watershed development and management programmes in the country. some of these are being implemented by non-government organisations also. Haryali is a watershed development project sponsored by the Central Government which aims at enabling the rural populations to conserve water for drinking, irrigation, fisheries and afforestation. The Project is being executed by Gram Panchayats with people's participation. Neeru-Meeru (water and you) programme (in Andhra Pradesh) and Arvary Pani Sansad (in Alwar Rajasthan) have taken up constructions of various water-harvesting structures such as percolation tanks. Dug out ponds (Johand). Check dams. etc... through people's participation. Tamil Nadu has made water harvesting structures in the houses compulsory. No building can be constructed without making structures for water harvesting.

watershed development projects in some areas have been successful in rejuvenating environment and economy. However. There are only a few success stories. In majority of cases. The programme is still in its nascent stage. There is a need to generate awareness regarding benefits of watershed development and management among people in the country, and through this integrated water resource management approach water availability can be ensured on sustainable basis.

Which watershed development project is Sponsored by Central Government?

1. Arvary Pani Sansad
2. Compulsory water harvesting structures in all houses
3. Neeru-Meeru
4. Haryali

**Options :**

- 485584133053. 1
- 485584133054. 2
- 485584133055. 3
- 485584133056. 4

**Question Number : 150 Question Id : 48558433265 Question Type : MCQ Option Shuffling : No Is Question Mandatory : No Calculator : None Response Time : N.A Think Time : N.A Minimum Instruction Time : 0**

**Correct Marks : 5 Wrong Marks : 1**

**Question Key Details :**

Key	Value
Comprehension	Comp2

Read the passage and answer 5 questions that follow:

Watershed management basically refers to efficient management and conservation of surface and groundwater resources. It involves prevention of runoff and shortage and recharge of groundwater through various methods like percolation tanks. Recharge wells. Etc. however. In broad sense watershed management includes conservation. Regeneration and judicious use of all resources- natural (like land water plants and animals) and human with in a watershed. Watershed management aims at bringing about balance between natural resources on the one hand and society on the other. The success of watershed development largely depends upon community participation.

The Central and State Government have initiated many watershed development and management programmes in the country. some of these are being implemented by non-government organisations also. Haryali is a watershed development project sponsored by the Central Government which aims at enabling the rural populations to conserve water for drinking, irrigation, fisheries and afforestation. The Project is being executed by Gram Panchayats with people's participation. Neeru-Meeru (water and you) programme (in Andhra Pradesh) and Arvary Pani Sansad (in Alwar Rajasthan) have taken up constructions of various water-harvesting structures such as percolation tanks. Dug out ponds (Johand). Check dams. etc... through people's participation. Tamil Nadu has made water harvesting structures in the houses compulsory. No building can be constructed without making structures for water harvesting.

watershed development projects in some areas have been successful in rejuvenating environment and economy. However. There are only a few success stories. In majority of cases. The programme is still in its nascent stage. There is a need to generate awareness regarding benefits of watershed development and management among people in the country, and through this integrated water resource management approach water availability can be ensured on sustainable basis.

Which of the following watershed management programme was started in Rajasthan?

1. Arvary Pani Sansad
2. Neeru-Meeru
3. Haryali
4. Water harvesting

**Options :**

485584133057. 1  
485584133058. 2  
485584133059. 3  
485584133060. 4

## History

<b>Group Number :</b>	8
<b>Group Id :</b>	485584746
<b>Group Maximum Duration :</b>	45
<b>Group Minimum Duration :</b>	45
<b>Show Attended Group? :</b>	No
<b>Edit Attended Group? :</b>	No
<b>Break time :</b>	0
<b>Group Marks :</b>	200
<b>Is this Group for Examiner? :</b>	No



Examiner permission :  
Show Progress Bar? :

Cant View  
No

## History

Section Id : 485584860  
Section Number : 1  
Section type : Online  
Mandatory or Optional : Mandatory  
Number of Questions : 50  
Number of Questions to be attempted : 40  
Section Marks : 200  
Enable Mark as Answered Mark for Review and Clear Response : Yes  
Maximum Instruction Time : 0  
Sub-Section Number : 1  
Sub-Section Id : 4855842428  
Question Shuffling Allowed : Yes  
Is Section Default? : null

Question Number : 151 Question Id : 48558433316 Question Type : MCQ Option Shuffling : No Is Question Mandatory :  
No Calculator : None Response Time : N.A Think Time : N.A Minimum Instruction Time : 0  
Correct Marks : 5 Wrong Marks : 1

Question Key Details :

Key	Value
Comprehension	MCQ

Who amongst the following was the engraver of Prabhavati Gupta's inscription?

1. Banabhatta
2. Chakradasa
3. Nagapiya
4. Sovanika

Options :

485584133261. 1  
485584133262. 2  
485584133263. 3  
485584133264. 4

Question Number : 152 Question Id : 48558433317 Question Type : MCQ Option Shuffling : No Is Question Mandatory :  
No Calculator : None Response Time : N.A Think Time : N.A Minimum Instruction Time : 0  
Correct Marks : 5 Wrong Marks : 1

Question Key Details :

Key	Value
Comprehension	MCQ

How many 'Mahajanapadas' are there in total?

1. Fourteen
2. Six
3. Sixteen
4. Twelve

**Options :**

485584133265. 1  
485584133266. 2  
485584133267. 3  
485584133268. 4

**Question Number : 153 Question Id : 48558433318 Question Type : MCQ Option Shuffling : No Is Question Mandatory : No Calculator : None Response Time : N.A Think Time : N.A Minimum Instruction Time : 0**

**Correct Marks : 5 Wrong Marks : 1**

**Question Key Details :**

Key	Value
Comprehension	MCQ

The Sangam texts mention categories of people living in the villages. Identify the categories:

- A. Masattuvan
- B. Setthis
- C. Uzhavar
- D. Adimai
- E. Vellalar

Choose the **correct** answer from the options given below:

1. A, B, C only
2. B, C, D only
3. C, D, E only
4. A, C, E only

**Options :**

485584133269. 1  
485584133270. 2  
485584133271. 3  
485584133272. 4

**Question Number : 154 Question Id : 48558433319 Question Type : MCQ Option Shuffling : No Is Question Mandatory : No Calculator : None Response Time : N.A Think Time : N.A Minimum Instruction Time : 0**

**Correct Marks : 5 Wrong Marks : 1**

**Question Key Details :**

Key	Value
Comprehension	MCQ

Identify the writer of the play titled 'Mrichchhakatika'?

1. Vasistha
2. Shudraka
3. Gotama
4. Panini

**Options :**

485584133273. 1  
485584133274. 2  
485584133275. 3  
485584133276. 4

**Question Number : 155 Question Id : 48558433320 Question Type : MCQ Option Shuffling : No Is Question Mandatory : No Calculator : None Response Time : N.A Think Time : N.A Minimum Instruction Time : 0**

**Correct Marks : 5 Wrong Marks : 1**

**Question Key Details :**

Key	Value
Comprehension	MCQ

Abdur Razzaq Samarqandi gave important description of which city?

1. Delhi
2. Vijayanagara
3. Sumtra
4. Magadha

**Options :**

485584133277. 1  
485584133278. 2  
485584133279. 3  
485584133280. 4

**Question Number : 156 Question Id : 48558433321 Question Type : MCQ Option Shuffling : No Is Question Mandatory : No Calculator : None Response Time : N.A Think Time : N.A Minimum Instruction Time : 0**

**Correct Marks : 5 Wrong Marks : 1**

**Question Key Details :**

Key	Value
Comprehension	MCQ

From Malabar he went to Maldives, where he stayed for 10 months as qazi, but eventually decided to go to Sri Lanka. He took a ship to Sumatra and from there another ship to Chinese town Zaytun. He travelled extensively in China. Who was he?

1. Ibn Battuta
2. Al-Biruni
3. Bernier
4. Hiuen-Tsang

**Options :**

485584133281. 1  
485584133282. 2  
485584133283. 3  
485584133284. 4

**Question Number : 157 Question Id : 48558433322 Question Type : MCQ Option Shuffling : No Is Question Mandatory : No Calculator : None Response Time : N.A Think Time : N.A Minimum Instruction Time : 0**

**Correct Marks : 5 Wrong Marks : 1**

**Question Key Details :**

Key	Value
Comprehension	MCQ

Mirabai, the best-known women poet of the bhakti tradition was Rajput princess from:-

1. Mewar
2. Marwar
3. Gujarat
4. Delhi

**Options :**

485584133285. 1  
485584133286. 2  
485584133287. 3  
485584133288. 4

**Question Number : 158 Question Id : 48558433323 Question Type : MCQ Option Shuffling : No Is Question Mandatory : No Calculator : None Response Time : N.A Think Time : N.A Minimum Instruction Time : 0**

**Correct Marks : 5 Wrong Marks : 1**

**Question Key Details :**

Key	Value
Comprehension	MCQ

Which among the following religious teachers are associated with Punjab?

- A. Tukaram
- B. Ganj Bakhsh
- C. Miyan Mir
- D. Fariduddin Ganj-i-Shakar
- E. Raidas

Choose the **correct** answer from the options given below:

- 1. A, B, C only
- 2. B, C, D only
- 3. C, D, E only
- 4. A, C, E only

**Options :**

- 485584133289. 1
- 485584133290. 2
- 485584133291. 3
- 485584133292. 4

**Question Number : 159 Question Id : 48558433324 Question Type : MCQ Option Shuffling : No Is Question Mandatory : No Calculator : None Response Time : N.A Think Time : N.A Minimum Instruction Time : 0**

**Correct Marks : 5 Wrong Marks : 1**

**Question Key Details :**

Key	Value
Comprehension	MCQ

Match List I with List II:-

LIST I (Terms)		LIST II (Meaning)	
A.	Zimmi	I.	Tomb Shrine
B.	Jizya	II.	Protected
C.	Dargah	III.	Pilgrimage
D.	Ziyarat	IV.	A religious tax paid by Hindus

Choose the **correct** answer from the options given below:

- 1. A-I, B-II, C-IV, D-III
- 2. A-II, B-IV, C-III, D-I
- 3. A-IV, B-III, C-II, D-I
- 4. A-II, B-IV, C-I, D-III

**Options :**

- 485584133293. 1
- 485584133294. 2
- 485584133295. 3
- 485584133296. 4

**Question Number : 160 Question Id : 48558433325 Question Type : MCQ Option Shuffling : No Is Question Mandatory : No Calculator : None Response Time : N.A Think Time : N.A Minimum Instruction Time : 0**

**Correct Marks : 5 Wrong Marks : 1**

**Question Key Details :**

Key	Value
Comprehension	MCQ

Which of the following is considered as one of the most spectacular temple in the Vijayanagara Empire?

1. Vitthala Temple
2. Virupaksha Temple
3. Hazara Rama Temple
4. Brihadishvara Temple

**Options :**

- 485584133297. 1
- 485584133298. 2
- 485584133299. 3
- 485584133300. 4

**Question Number : 161 Question Id : 48558433326 Question Type : MCQ Option Shuffling : No Is Question Mandatory : No Calculator : None Response Time : N.A Think Time : N.A Minimum Instruction Time : 0**

**Correct Marks : 5 Wrong Marks : 1**

**Question Key Details :**

Key	Value
Comprehension	MCQ

In which year did Krishnadeva Raya defeat the sultan of Bijapur?

1. 1529
2. 1520
3. 1514
4. 1512

**Options :**

- 485584133301. 1
- 485584133302. 2
- 485584133303. 3
- 485584133304. 4

**Question Number : 162 Question Id : 48558433327 Question Type : MCQ Option Shuffling : No Is Question Mandatory : No Calculator : None Response Time : N.A Think Time : N.A Minimum Instruction Time : 0**

**Correct Marks : 5 Wrong Marks : 1**

**Question Key Details :**

Key	Value
Comprehension	MCQ

Arrange the establishment of the following kingdoms in a chronological order:

- A. Emergence of the Sultanates of Ahmadnagar, Bijapur and Berar
- B. Establishment of Bahmani Kingdom.
- C. Establishment of Vijayanagara Empire.
- D. Establishment of the Sultanate of Golconda.
- E. Conquest of Goa by the Portuguese

Choose the **correct** answer from the options given below:

- 1. D, E, A, B, C
- 2. B, C, D, E, A
- 3. A, B, C, D, E
- 4. C, B, A, E, D

**Options :**

- 485584133305. 1
- 485584133306. 2
- 485584133307. 3
- 485584133308. 4

**Question Number : 163 Question Id : 48558433328 Question Type : MCQ Option Shuffling : No Is Question Mandatory : No Calculator : None Response Time : N.A Think Time : N.A Minimum Instruction Time : 0**

**Correct Marks : 5 Wrong Marks : 1**

**Question Key Details :**

Key	Value
Comprehension	MCQ

From the statements given below, choose the **correct** ones about the fortifications and roads in Vijayanagara Empire.

- A. Paes, an ambassador from Persia, mentioned seven lines of forts.
- B. Razzaq said that cementing was used in the walls of the fort.
- C. There was no fortification around the agricultural fields.
- D. The fort was entered through well-guarded gates linking the city to the major road.
- E. The arch on the gateway led to the fortified settlement.

Choose the **correct** answer from the options given below:

- 1. E, A only
- 2. D, E only
- 3. C, D only
- 4. B, A only

**Options :**

- 485584133309. 1
- 485584133310. 2
- 485584133311. 3
- 485584133312. 4

**Question Number : 164 Question Id : 48558433329 Question Type : MCQ Option Shuffling : No Is Question Mandatory : No Calculator : None Response Time : N.A Think Time : N.A Minimum Instruction Time : 0**

**Correct Marks : 5 Wrong Marks : 1**

**Question Key Details :**

Key	Value
Comprehension	MCQ

Match List I with List II:-

LIST I (Foreign Traveler)		LIST II (Country)	
A.	Nicolo de Conti	I.	Russia
B.	Domingo Paes	II.	Persia
C.	Nikitin	III.	Italy
D.	Abdur Razzaq	IV.	Portugal

Choose the correct answer from the options given below:

1. A-III, B-IV, C-I, D-II
2. A-I, B-II, C-III, D-IV
3. A-IV, B-I, C-III, D-II
4. A-II, B-III, C-I, D-IV

**Options :**

- 485584133313. 1
- 485584133314. 2
- 485584133315. 3
- 485584133316. 4

**Question Number : 165 Question Id : 48558433330 Question Type : MCQ Option Shuffling : No Is Question Mandatory : No Calculator : None Response Time : N.A Think Time : N.A Minimum Instruction Time : 0**

**Correct Marks : 5 Wrong Marks : 1**

**Question Key Details :**

Key	Value
Comprehension	MCQ



Arrange these landmarks of the Mughal Empire in a chronological order.

- A. Reign of Akbar
- B. Reign of Humayun
- C. Reign of Shah Jahan
- D. Reign of Jahangir
- E. Reign of Aurangzeb

Choose the **correct** answer from the options given below:

- 1. A, B, C, D, E
- 2. B, A, D, C, E
- 3. E, D, B, C, A
- 4. B, C, A, D, E

**Options :**

- 485584133317. 1
- 485584133318. 2
- 485584133319. 3
- 485584133320. 4

**Question Number : 166 Question Id : 48558433331 Question Type : MCQ Option Shuffling : No Is Question Mandatory : No Calculator : None Response Time : N.A Think Time : N.A Minimum Instruction Time : 0**

**Correct Marks : 5 Wrong Marks : 1**

**Question Key Details :**

Key	Value
Comprehension	MCQ

In a painting titled "Jahangir's dream", the Mughal Emperor Jahangir is portrayed as embracing:-

- 1. Shah of Iraq
- 2. Abbasid Caliph
- 3. Shah of Iran
- 4. Safavid Shah Abbas

**Options :**

- 485584133321. 1
- 485584133322. 2
- 485584133323. 3
- 485584133324. 4

**Question Number : 167 Question Id : 48558433332 Question Type : MCQ Option Shuffling : No Is Question Mandatory : No Calculator : None Response Time : N.A Think Time : N.A Minimum Instruction Time : 0**

**Correct Marks : 5 Wrong Marks : 1**

**Question Key Details :**

Key	Value
Comprehension	MCQ

Akbar's quest for religious knowledge led to inter-faith debates in the Ibadat Khana at:-

1. Agra Fort
2. Red Fort of Shahjahanabad
3. Dargah of Nizamuddin Aulia
4. Fatehpur Sikri

**Options :**

485584133325. 1  
485584133326. 2  
485584133327. 3  
485584133328. 4

**Question Number : 168 Question Id : 48558433333 Question Type : MCQ Option Shuffling : No Is Question Mandatory : No Calculator : None Response Time : N.A Think Time : N.A Minimum Instruction Time : 0**

**Correct Marks : 5 Wrong Marks : 1**

**Question Key Details :**

Key	Value
Comprehension	MCQ

Match List I with List II:-

LIST I		LIST II	
A.	Gulbadan Begum	I.	Alamgir Nama
B.	Abu'l Fzal	II.	Humayun Nama
C.	Muhammad Kazim	III.	Akbar Nama
D.	Abdul Hamid Lahori	IV.	Badshah Nama

Choose the **correct** answer from the options given below:

1. A-III, B-II, C-I, D-IV
2. A-I, B-II, C-IV, D-III
3. A-II, B-III, C-I, D-IV
4. A-IV, B-III, C-II, D-I

**Options :**

485584133329. 1  
485584133330. 2  
485584133331. 3  
485584133332. 4

**Question Number : 169 Question Id : 48558433334 Question Type : MCQ Option Shuffling : No Is Question Mandatory : No Calculator : None Response Time : N.A Think Time : N.A Minimum Instruction Time : 0**

**Correct Marks : 5 Wrong Marks : 1**

**Question Key Details :**

Key	Value
Comprehension	MCQ

The areas under Ryotwari Settlements were surveyed after how many years?

1. 10 years
2. 20 years
3. 30 years
4. 40 years

**Options :**

- 485584133333. 1
- 485584133334. 2
- 485584133335. 3
- 485584133336. 4

**Question Number : 170 Question Id : 48558433335 Question Type : MCQ Option Shuffling : No Is Question Mandatory : No Calculator : None Response Time : N.A Think Time : N.A Minimum Instruction Time : 0**

**Correct Marks : 5 Wrong Marks : 1**

**Question Key Details :**

Key	Value
Comprehension	MCQ

Where was first British colonial rule established in India?

1. Madras Presidency
2. Bombay Presidency
3. Bengal Subah
4. Mysore State

**Options :**

- 485584133337. 1
- 485584133338. 2
- 485584133339. 3
- 485584133340. 4

**Question Number : 171 Question Id : 48558433336 Question Type : MCQ Option Shuffling : No Is Question Mandatory : No Calculator : None Response Time : N.A Think Time : N.A Minimum Instruction Time : 0**

**Correct Marks : 5 Wrong Marks : 1**

**Question Key Details :**

Key	Value
Comprehension	MCQ

The revenue system that was introduced in Bombay Deccan came to be known as:-

1. Permanent Settlement
2. Ryotwari Settlement
3. Mahalwari Settlement
4. Taluqudari Settlement

**Options :**

485584133341. 1  
485584133342. 2  
485584133343. 3  
485584133344. 4

**Question Number : 172 Question Id : 48558433337 Question Type : MCQ Option Shuffling : No Is Question Mandatory : No Calculator : None Response Time : N.A Think Time : N.A Minimum Instruction Time : 0**

**Correct Marks : 5 Wrong Marks : 1**

**Question Key Details :**

Key	Value
Comprehension	MCQ

Which of the following are **correct** about Deccan riots?

- A. The movement began at Supa, a village in Poona.
- B. Supa was an inaccessible forest area with no markets.
- C. On 12 may 1875, ryots attacked the shopkeepers.
- D. Ryots set fire to the houses of British and protected the houses of Sahukars and moneylenders.
- E. Account books were not destroyed by the ryots rather preserved by them.

Choose the **correct** answer from the options given below:

1. D and E only
2. A and B only
3. A and C only
4. B and D only

**Options :**

485584133345. 1  
485584133346. 2  
485584133347. 3  
485584133348. 4

**Question Number : 173 Question Id : 48558433338 Question Type : MCQ Option Shuffling : No Is Question Mandatory : No Calculator : None Response Time : N.A Think Time : N.A Minimum Instruction Time : 0**

**Correct Marks : 5 Wrong Marks : 1**

**Question Key Details :**

Key	Value
Comprehension	MCQ

Match List I with List II

LIST I		LIST II	
A.	British takeover of Deccan	I.	1757
B.	The British become rulers of Bengal	II.	1911
C.	Plague spreads to major cities	III.	1818
D.	Transfer of capital from Calcutta to Delhi	IV.	1896

Choose the **correct** answer from the options given below:

1. A-IV, B-III, C-II, D-I
2. A-I, B-II, C-III, D-IV
3. A-II, B-IV, C-I, D-III
4. A-III, B-I, C-IV, D-III

**Options :**

485584133349. 1  
485584133350. 2  
485584133351. 3  
485584133352. 4

**Question Number : 174 Question Id : 48558433339 Question Type : MCQ Option Shuffling : No Is Question Mandatory : No Calculator : None Response Time : N.A Think Time : N.A Minimum Instruction Time : 0**

**Correct Marks : 5 Wrong Marks : 1**

**Question Key Details :**

Key	Value
Comprehension	MCQ

When was Awadh formally annexed by the British?

1. 1801
2. 1842
3. 1851
4. 1856

**Options :**

485584133353. 1  
485584133354. 2  
485584133355. 3  
485584133356. 4

**Question Number : 175 Question Id : 48558433340 Question Type : MCQ Option Shuffling : No Is Question Mandatory : No Calculator : None Response Time : N.A Think Time : N.A Minimum Instruction Time : 0**

**Correct Marks : 5 Wrong Marks : 1**

**Question Key Details :**

Key	Value
Comprehension	MCQ

Who said, "A cherry that will drop into our mouth one day" in the context of Awadh?

1. Lord Dalhousie
2. Lord Wellesley
3. Lord Canning
4. Lord Curzon

**Options :**

485584133357. 1  
485584133358. 2  
485584133359. 3  
485584133360. 4

**Question Number : 176 Question Id : 48558433341 Question Type : MCQ Option Shuffling : No Is Question Mandatory : No Calculator : None Response Time : N.A Think Time : N.A Minimum Instruction Time : 0**

**Correct Marks : 5 Wrong Marks : 1**

**Question Key Details :**

Key	Value
Comprehension	MCQ

Find out the name of the painter who painted "In Memoriam" From the option given below:

1. Thomas Jones Barker
2. Joseph Noel Paton
3. Miss Wheeler
4. Henry Lawrence

**Options :**

485584133361. 1  
485584133362. 2  
485584133363. 3  
485584133364. 4

**Question Number : 177 Question Id : 48558433342 Question Type : MCQ Option Shuffling : No Is Question Mandatory : No Calculator : None Response Time : N.A Think Time : N.A Minimum Instruction Time : 0**

**Correct Marks : 5 Wrong Marks : 1**

**Question Key Details :**

Key	Value
Comprehension	MCQ

Under the leadership of which Governor General the custom of Sati was legally abolished?

1. Lord Curzon
2. Lord William Bentinck
3. Lord Dalhousie
4. Lord Wellesley

**Options :**

485584133365. 1  
485584133366. 2  
485584133367. 3  
485584133368. 4

**Question Number : 178 Question Id : 48558433343 Question Type : MCQ Option Shuffling : No Is Question Mandatory : No Calculator : None Response Time : N.A Think Time : N.A Minimum Instruction Time : 0**

**Correct Marks : 5 Wrong Marks : 1**

**Question Key Details :**

Key	Value
Comprehension	MCQ

Arrange the following in chronological order according to their date of occurrence.

- A. Sepoy Mutiny in Meerut
- B. Summary settlement in Awadh
- C. Rising in Lucknow
- D. Rani of Jhansi killed in battle

Choose the **correct** answer from the options given below:

1. B, C, A, D
2. A, C, D, B
3. B, A, C, D
4. C, B, A, D

**Options :**

485584133369. 1  
485584133370. 2  
485584133371. 3  
485584133372. 4

**Question Number : 179 Question Id : 48558433344 Question Type : MCQ Option Shuffling : No Is Question Mandatory : No Calculator : None Response Time : N.A Think Time : N.A Minimum Instruction Time : 0**

**Correct Marks : 5 Wrong Marks : 1**

**Question Key Details :**

Key	Value
Comprehension	MCQ

Arrange the following European trading companies in the chronological order in context of their settlement in India.

- A. Dutch
- B. British
- C. French
- D. Portuguese

Choose the **correct** answer from the options given below:

- 1. A, B, C, D
- 2. D, A, C, B
- 3. D, A, B, C
- 4. C, A, B, D

**Options :**

- 485584133373. 1
- 485584133374. 2
- 485584133375. 3
- 485584133376. 4

**Question Number : 180 Question Id : 48558433345 Question Type : MCQ Option Shuffling : No Is Question Mandatory : No Calculator : None Response Time : N.A Think Time : N.A Minimum Instruction Time : 0**

**Correct Marks : 5 Wrong Marks : 1**

**Question Key Details :**

Key	Value
Comprehension	MCQ

Which of the following statement is **incorrect**?

- 1. Lal, Bal and Pal were the leaders of Swadeshi Movement.
- 2. Extremist leaders are known for their moderate politics.
- 3. Moderates preferred gradual and persuasive approach.
- 4. Gopal Krishna Gokhale was a Moderate leader.

**Options :**

- 485584133377. 1
- 485584133378. 2
- 485584133379. 3
- 485584133380. 4

**Question Number : 181 Question Id : 48558433346 Question Type : MCQ Option Shuffling : No Is Question Mandatory : No Calculator : None Response Time : N.A Think Time : N.A Minimum Instruction Time : 0**

**Correct Marks : 5 Wrong Marks : 1**

**Question Key Details :**

Key	Value
Comprehension	MCQ



Through 'Salt March', Gandhi took the national movement to every household. This tactical wisdom was to bring larger participation of \_\_\_\_\_ in the freedom struggle.

1. Dalits
2. Menial workers
3. Peasants
4. Women

**Options :**

- 485584133381. 1
- 485584133382. 2
- 485584133383. 3
- 485584133384. 4

**Question Number : 182 Question Id : 48558433347 Question Type : MCQ Option Shuffling : No Is Question Mandatory : No Calculator : None Response Time : N.A Think Time : N.A Minimum Instruction Time : 0**

**Correct Marks : 5 Wrong Marks : 1**

**Question Key Details :**

Key	Value
Comprehension	MCQ

In which year did Gandhi left British India for South Africa as a lawyer?

1. 1881
2. 1893
3. 1894
4. 1915

**Options :**

- 485584133385. 1
- 485584133386. 2
- 485584133387. 3
- 485584133388. 4

**Question Number : 183 Question Id : 48558433348 Question Type : MCQ Option Shuffling : No Is Question Mandatory : No Calculator : None Response Time : N.A Think Time : N.A Minimum Instruction Time : 0**

**Correct Marks : 5 Wrong Marks : 1**

**Question Key Details :**

Key	Value
Comprehension	MCQ

Due to which event the British instituted 'censorship of the press' and detention without trial. It was later known as the Rowlatt Act?

1. The Great Depression
2. World War I
3. World War II
4. Balkan Wars

**Options :**

485584133389. 1  
485584133390. 2  
485584133391. 3  
485584133392. 4

**Question Number : 184 Question Id : 48558433349 Question Type : MCQ Option Shuffling : No Is Question Mandatory : No Calculator : None Response Time : N.A Think Time : N.A Minimum Instruction Time : 0**

**Correct Marks : 5 Wrong Marks : 1**

**Question Key Details :**

Key	Value
Comprehension	MCQ

Match List I with List II

LIST I (Non-Cooperation Social Groups)		LIST II (Participation in Non-Cooperation)	
A.	The working class	I.	Refused to carry loads for colonial officers
B.	Hill tribes in northern Andhra	II.	Did not pay taxes
C.	Peasants in Kumaun	III.	Violated the forest laws
D.	Farmers in Awadh	IV.	Strike

Choose the correct answer from the options given below:

1. A-IV, B-III, C-I, D-II
2. A-I, B-III, C-II, D-IV
3. A-I, B-II, C-III, D-IV
4. A-IV, B-I, C-III, D-II

**Options :**

485584133393. 1  
485584133394. 2  
485584133395. 3  
485584133396. 4

**Question Number : 185 Question Id : 48558433350 Question Type : MCQ Option Shuffling : No Is Question Mandatory : No Calculator : None Response Time : N.A Think Time : N.A Minimum Instruction Time : 0**

**Correct Marks : 5 Wrong Marks : 1**

**Question Key Details :**

Key	Value
-----	-------

Arrange the following in a chronological order.

- A. Resolution at Lahore, demanding a measure of autonomy for the Muslim-majority areas.
- B. Violence breaks out between Hindus and Muslims in Calcutta.
- C. The name Pakistan is coined by a Punjabi Muslim student at Cambridge, Choudhary Rehmat Ali.
- D. The Muslim League declares "Direct Action" for winning Pakistan.
- E. Mohammad Iqbal speaks of the need for an autonomous North West Indian Muslim state.

Choose the **correct** answer from the options given below:

1. A, C, E, B, D
2. C, E, B, D, A
3. E, C, A, D, B
4. B, C, D, A, E

**Options :**

485584133397. 1  
 485584133398. 2  
 485584133399. 3  
 485584133400. 4

**Question Number : 186 Question Id : 48558433351 Question Type : MCQ Option Shuffling : No Is Question Mandatory : No Calculator : None Response Time : N.A Think Time : N.A Minimum Instruction Time : 0**

**Correct Marks : 5 Wrong Marks : 1**

**Question Key Details :**

Key	Value
Comprehension	MCQ

"The British element is gone, but they have left the mischief behind" Who said this against the separate electorates?

1. Jawaharlal Nehru
2. Vallabhbhai Patel
3. B. Pocker Bahadur
4. R. V. Dhulekar

**Options :**

485584133401. 1  
 485584133402. 2  
 485584133403. 3  
 485584133404. 4

**Question Number : 187 Question Id : 48558433352 Question Type : MCQ Option Shuffling : No Is Question Mandatory : No Calculator : None Response Time : N.A Think Time : N.A Minimum Instruction Time : 0**

**Correct Marks : 5 Wrong Marks : 1**

**Question Key Details :**

Key	Value
-----	-------

Comprehension	MCQ
---------------	-----

Which of the following language was proposed by Mahatma Gandhi as the national language as it could be spoken by the common people?

1. Arabic
2. Sanskrit
3. Hindustani
4. Persian

**Options :**

485584133405. 1  
485584133406. 2  
485584133407. 3  
485584133408. 4

**Question Number : 188 Question Id : 48558433353 Question Type : MCQ Option Shuffling : No Is Question Mandatory : No Calculator : None Response Time : N.A Think Time : N.A Minimum Instruction Time : 0**

**Correct Marks : 5 Wrong Marks : 1**

**Question Key Details :**

Key	Value
Comprehension	MCQ

Which articles provide the Fundamental Rights of "Cultural and Education Rights"

1. Articles 25-26
2. Articles 27-28
3. Articles 29-30
4. Articles 14-16

**Options :**

485584133409. 1  
485584133410. 2  
485584133411. 3  
485584133412. 4

**Question Number : 189 Question Id : 48558433354 Question Type : MCQ Option Shuffling : No Is Question Mandatory : No Calculator : None Response Time : N.A Think Time : N.A Minimum Instruction Time : 0**

**Correct Marks : 5 Wrong Marks : 1**

**Question Key Details :**

Key	Value
Comprehension	MCQ

Who said that separate electorate is a "Poison that has entered the body politics of our country"?

1. S. N. Mukherjee
2. Vallabhbhai Patel
3. Rajendra Prasad
4. Jawaharlal Nehru

**Options :**

485584133413. 1  
485584133414. 2  
485584133415. 3  
485584133416. 4

**Question Number : 190 Question Id : 48558433355 Question Type : MCQ Option Shuffling : No Is Question Mandatory : No Calculator : None Response Time : N.A Think Time : N.A Minimum Instruction Time : 0**

**Correct Marks : 5 Wrong Marks : 1**

**Question Key Details :**

Key	Value
Comprehension	MCQ

Arrange the following in a chronological order.

- A. Labour Government comes to Power in Britain.
- B. Cabinet Mission's Announcement.
- C. Muslim League announces Direct Action Day.
- D. General Election of India.

Choose the **correct** answer from the options given below:

1. A, B, C, D
2. A, D, B, C
3. C, A, B, D
4. B, A, C, D

**Options :**

485584133417. 1  
485584133418. 2  
485584133419. 3  
485584133420. 4

**Sub-Section Number :** 2  
**Sub-Section Id :** 4855842429  
**Question Shuffling Allowed :** No  
**Is Section Default? :** null

**Question Number : 191 Question Id : 48558433356 Question Type : MCQ Option Shuffling : No Is Question Mandatory : No Calculator : None Response Time : N.A Think Time : N.A Minimum Instruction Time : 0**

**Correct Marks : 5 Wrong Marks : 1**

**Question Key Details :**

Key	Value
Comprehension	Comp1

**Read the passage and answer the questions:**

Mesopotamian texts datable to the third millennium BCE refer to copper coming from a region called Magan. Interestingly enough copper found at Mesopotamian sites also contains traces of nickel. Other archaeological finds suggestive of long-distance contacts include Harappan seals, weights, dice and beads. Mesopotamian texts mention contact with regions named Dilmun, Magan and Meluhha. They mention the products from Meluhha: Carnelian, lapis lazuli, copper, gold, and varieties of wood. A Mesopotamian myth says of Meluhha: "May your bird be the haja-bird, may its call be heard in the royal palace."

"Meluhha" in the Mesopotamian texts refers to:-

1. Oman
2. Bahrain
3. Iran
4. Harappa

**Options :**

485584133421. 1  
485584133422. 2  
485584133423. 3  
485584133424. 4

**Question Number : 192 Question Id : 48558433357 Question Type : MCQ Option Shuffling : No Is Question Mandatory : No Calculator : None Response Time : N.A Think Time : N.A Minimum Instruction Time : 0**

**Correct Marks : 5 Wrong Marks : 1**

**Question Key Details :**

Key	Value
Comprehension	Comp1

**Read the passage and answer the questions:**

Mesopotamian texts datable to the third millennium BCE refer to copper coming from a region called Magan. Interestingly enough copper found at Mesopotamian sites also contains traces of nickel. Other archaeological finds suggestive of long-distance contacts include Harappan seals, weights, dice and beads. Mesopotamian texts mention contact with regions named Dilmun, Magan and Meluhha. They mention the products from Meluhha: Carnelian, lapis lazuli, copper, gold, and varieties of wood. A Mesopotamian myth says of Meluhha: "May your bird be the haja-bird, may its call be heard in the royal palace."

According to some archaeologists, the haja-bird mentioned in the Mesopotamian texts was:-

1. Peacock
2. Eagle
3. Koel
4. Sparrow

**Options :**

485584133425. 1  
485584133426. 2  
485584133427. 3  
485584133428. 4

**Question Number : 193 Question Id : 48558433358 Question Type : MCQ Option Shuffling : No Is Question Mandatory : No Calculator : None Response Time : N.A Think Time : N.A Minimum Instruction Time : 0**

**Correct Marks : 5 Wrong Marks : 1**

**Question Key Details :**

Key	Value
Comprehension	Compl

**Read the passage and answer the questions:**

Mesopotamian texts datable to the third millennium BCE refer to copper coming from a region called Magan. Interestingly enough copper found at Mesopotamian sites also contains traces of nickel. Other archaeological finds suggestive of long-distance contacts include Harappan seals, weights, dice and beads. Mesopotamian texts mention contact with regions named Dilmun, Magan and Meluhha. They mention the products from Meluhha: Carnelian, lapis lazuli, copper, gold, and varieties of wood. A Mesopotamian myth says of Meluhha: "May your bird be the haja-bird, may its call be heard in the royal palace."

What was the Harappan seal made of?

1. Chert
2. Carnelian
3. Steatite
4. Lapis Lazuli

**Options :**

485584133429. 1  
485584133430. 2  
485584133431. 3  
485584133432. 4

**Question Number : 194 Question Id : 48558433359 Question Type : MCQ Option Shuffling : No Is Question Mandatory : No Calculator : None Response Time : N.A Think Time : N.A Minimum Instruction Time : 0**

**Correct Marks : 5 Wrong Marks : 1**

**Question Key Details :**

Key	Value
-----	-------

Comprehension	Comp1
---------------	-------

**Read the passage and answer the questions:**

Mesopotamian texts datable to the third millennium BCE refer to copper coming from a region called Magan. Interestingly enough copper found at Mesopotamian sites also contains traces of nickel. Other archaeological finds suggestive of long-distance contacts include Harappan seals, weights, dice and beads. Mesopotamian texts mention contact with regions named Dilmun, Magan and Meluhha. They mention the products from Meluhha: Carnelian, lapis lazuli, copper, gold, and varieties of wood. A Mesopotamian myth says of Meluhha: “May your bird be the haja-bird, may its call be heard in the royal palace.”

Specialised drills have been found at which of the following Harappan sites?

- A. Nageshwar
- B. Dholavira
- C. Lothal
- D. Balakot
- E. Chanhudaro

Choose the **correct** answer from the options given below:

- 1. C, D, E only
- 2. B, C, E only
- 3. A, B, D only
- 4. A, B, C only

**Options :**

- 485584133433. 1
- 485584133434. 2
- 485584133435. 3
- 485584133436. 4

**Question Number : 195 Question Id : 48558433360 Question Type : MCQ Option Shuffling : No Is Question Mandatory : No Calculator : None Response Time : N.A Think Time : N.A Minimum Instruction Time : 0**

**Correct Marks : 5 Wrong Marks : 1**

**Question Key Details :**

Key	Value
Comprehension	Comp1

**Read the passage and answer the questions:**

Mesopotamian texts datable to the third millennium BCE refer to copper coming from a region called Magan. Interestingly enough copper found at Mesopotamian sites also contains traces of nickel. Other archaeological finds suggestive of long-distance contacts include Harappan seals, weights, dice and beads. Mesopotamian texts mention contact with regions named Dilmun, Magan and Meluhha. They mention the products from Meluhha: Carnelian, lapis lazuli, copper, gold, and varieties of wood. A Mesopotamian myth says of Meluhha: “May your bird be the haja-bird, may its call be heard in the royal palace.”



Match List I with List II:-

LIST I		LIST II	
A.	Nageshwar	I.	Lapis Lazuli
B.	Shortughai	II.	Copper
C.	Lothal	III.	Shells
D.	Khetri	IV.	Carnelian

Choose the **correct** answer from the options given below:

1. A-IV, B-II, C-III, D-I
2. A-II, B-IV, C-I, D-III
3. A-III, B-I, C-IV, D-II
4. A-I, B-III, C-II, D-IV

**Options :**

485584133437. 1  
485584133438. 2  
485584133439. 3  
485584133440. 4

**Sub-Section Number :**

3

**Sub-Section Id :**

4855842430

**Question Shuffling Allowed :**

No

**Is Section Default? :**

null

**Question Number : 196 Question Id : 48558433361 Question Type : MCQ Option Shuffling : No Is Question Mandatory : No Calculator : None Response Time : N.A Think Time : N.A Minimum Instruction Time : 0**

**Correct Marks : 5 Wrong Marks : 1**

**Question Key Details :**

Key	Value
Comprehension	Comp2

Read the passage and answer following five questions:

Here are verses from the Rigveda invoking Agni, the god of fire, often identified with the sacrificial fire, into which offerings were made so as to reach the other deities. "Bring, O strong one, this sacrifice of ours to the gods, O wise one, as a liberal giver. Bestow on us, O priest, abundant food. Agni, obtain, by sacrificing, mighty wealth for us". Verses such as these were composed in a special kind of Sanskrit, known as Vedic Sanskrit. They were taught orally to men belonging to priestly families.

The 'Rigveda' consists of \_\_\_\_\_ in praise of a variety of deities

1. Stories
2. Plays
3. Scripts
4. Hymns

**Options :**

- 485584133441. 1
- 485584133442. 2
- 485584133443. 3
- 485584133444. 4

**Question Number : 197 Question Id : 48558433362 Question Type : MCQ Option Shuffling : No Is Question Mandatory : No Calculator : None Response Time : N.A Think Time : N.A Minimum Instruction Time : 0**

**Correct Marks : 5 Wrong Marks : 1**

**Question Key Details :**

Key	Value
Comprehension	Comp2

Read the passage and answer following five questions:

Here are verses from the Rigveda invoking Agni, the god of fire, often identified with the sacrificial fire, into which offerings were made so as to reach the other deities. "Bring, O strong one, this sacrifice of ours to the gods, O wise one, as a liberal giver. Bestow on us, O priest, abundant food. Agni, obtain, by sacrificing, mighty wealth for us". Verses such as these were composed in a special kind of Sanskrit, known as Vedic Sanskrit. They were taught orally to men belonging to priestly families.

Identify among the following another deity widely mentioned in the Rigveda.

- 1. Shiva
- 2. Indra
- 3. Vishnu
- 4. Krishna

**Options :**

- 485584133445. 1
- 485584133446. 2
- 485584133447. 3
- 485584133448. 4

**Question Number : 198 Question Id : 48558433363 Question Type : MCQ Option Shuffling : No Is Question Mandatory : No Calculator : None Response Time : N.A Think Time : N.A Minimum Instruction Time : 0**

**Correct Marks : 5 Wrong Marks : 1**

**Question Key Details :**

Key	Value
Comprehension	Comp2

Read the passage and answer following five questions:

Here are verses from the Rigveda invoking Agni, the god of fire, often identified with the sacrificial fire, into which offerings were made so as to reach the other deities. "Bring, O strong one, this sacrifice of ours to the gods, O wise one, as a liberal giver. Bestow on us, O priest, abundant food. Agni, obtain, by sacrificing, mighty wealth for us". Verses such as these were composed in a special kind of Sanskrit, known as Vedic Sanskrit. They were taught orally to men belonging to priestly families.

Identify the timeline of Rigveda compilation.

1. C.1500 and 1000 BCE
2. C.1200 and 1000 BCE
3. C.1100 and 1200 BCE
4. C.1000 and 1500 BCE

**Options :**

485584133449. 1  
485584133450. 2  
485584133451. 3  
485584133452. 4

**Question Number : 199 Question Id : 48558433364 Question Type : MCQ Option Shuffling : No Is Question Mandatory : No Calculator : None Response Time : N.A Think Time : N.A Minimum Instruction Time : 0**

**Correct Marks : 5 Wrong Marks : 1**

**Question Key Details :**

Key	Value
Comprehension	Comp2

Read the passage and answer following five questions:

Here are verses from the Rigveda invoking Agni, the god of fire, often identified with the sacrificial fire, into which offerings were made so as to reach the other deities. "Bring, O strong one, this sacrifice of ours to the gods, O wise one, as a liberal giver. Bestow on us, O priest, abundant food. Agni, obtain, by sacrificing, mighty wealth for us". Verses such as these were composed in a special kind of Sanskrit, known as Vedic Sanskrit. They were taught orally to men belonging to priestly families.

Which language was used to compose texts like Rigveda and Upanishads?

1. Hindavi
2. Pali
3. Sanskrit
4. Prakrit

**Options :**

485584133453. 1  
485584133454. 2  
485584133455. 3  
485584133456. 4

**Question Number : 200 Question Id : 48558433365 Question Type : MCQ Option Shuffling : No Is Question Mandatory : No Calculator : None Response Time : N.A Think Time : N.A Minimum Instruction Time : 0**

**Correct Marks : 5 Wrong Marks : 1**

**Question Key Details :**

Key	Value
Comprehension	Comp2

Read the passage and answer following five questions:

Here are verses from the Rigveda invoking Agni, the god of fire, often identified with the sacrificial fire, into which offerings were made so as to reach the other deities. "Bring, O strong one, this sacrifice of ours to the gods, O wise one, as a liberal giver. Bestow on us, O priest, abundant food. Agni, obtain, by sacrificing, mighty wealth for us". Verses such as these were composed in a special kind of Sanskrit, known as Vedic Sanskrit. They were taught orally to men belonging to priestly families.

Identify the 'sacrifices' mentioned in Rigveda.

- A. Samsara
- B. Rajasuya
- C. Kutagarashala
- D. Soma
- E. Ashvamedha

Choose the **correct** answer from the options given below:

- 1. A, B only
- 2. B, D only
- 3. B, E only
- 4. C, E only

**Options :**

- 485584133457. 1
- 485584133458. 2
- 485584133459. 3
- 485584133460. 4

## Legal Studies

Group Number :	9
Group Id :	485584747
Group Maximum Duration :	45
Group Minimum Duration :	45
Show Attended Group? :	No
Edit Attended Group? :	No
Break time :	0
Group Marks :	200
Is this Group for Examiner? :	No
Examiner permission :	Cant View
Show Progress Bar? :	No

## Legal Studies

Section Id :	485584861
Section Number :	1
Section type :	Online

<b>Mandatory or Optional :</b>	Mandatory
<b>Number of Questions :</b>	50
<b>Number of Questions to be attempted :</b>	40
<b>Section Marks :</b>	200
<b>Enable Mark as Answered Mark for Review and Clear Response :</b>	Yes
<b>Maximum Instruction Time :</b>	0
<b>Sub-Section Number :</b>	1
<b>Sub-Section Id :</b>	4855842431
<b>Question Shuffling Allowed :</b>	Yes
<b>Is Section Default? :</b>	null

**Question Number : 201 Question Id : 48558433836 Question Type : MCQ Option Shuffling : No Is Question Mandatory : No Calculator : None Response Time : N.A Think Time : N.A Minimum Instruction Time : 0**

**Correct Marks : 5 Wrong Marks : 1**

**Question Key Details :**

Key	Value
Comprehension	MCQ

India's first Attorney General was

1. M.C. Setalvad
2. Justice P. Sathasivam
3. Justice V. Ramaswamy
4. Mukul Rohtagi

**Options :**

485584135341. 1  
485584135342. 2  
485584135343. 3  
485584135344. 4

**Question Number : 201 Question Id : 48558433836 Question Type : MCQ Option Shuffling : No Is Question Mandatory : No Calculator : None Response Time : N.A Think Time : N.A Minimum Instruction Time : 0**

**Correct Marks : 5 Wrong Marks : 1**

**Question Key Details :**

Key	Value
Comprehension	MCQ

ਭਾਰਤ ਦਾ ਪਹਿਲਾ ਅਟਾਰਨੀ ਜਨਰਲ ਸੀ :-

1. ਐਮ. ਸੀ. ਸੀਤਲਵਡ
2. ਜਸਟਿਸ ਪੀ. ਸਾਥਾਸਿਵਮ
3. ਜਸਟਿਸ ਵੀ. ਰਾਮਾਸਵਾਮੀ
4. ਮੁਕੁਲ ਰੋਹਤੇਗੀ

**Options :**

485584135341. 1  
485584135342. 2

485584135343. 3

485584135344. 4

**Question Number : 202 Question Id : 48558433837 Question Type : MCQ Option Shuffling : No Is Question Mandatory : No Calculator : None Response Time : N.A Think Time : N.A Minimum Instruction Time : 0**

**Correct Marks : 5 Wrong Marks : 1**

**Question Key Details :**

Key	Value
Comprehension	MCQ

What is enshrined in Article 217 of the Indian Constitution?

1. The procedure for appointment of judges of Supreme Court
2. The procedure for appointment of judges of High Court
3. The procedure for appointment of judges of lower Judiciary
4. The procedure of removal of Judges

**Options :**

485584135345. 1

485584135346. 2

485584135347. 3

485584135348. 4

**Question Number : 202 Question Id : 48558433837 Question Type : MCQ Option Shuffling : No Is Question Mandatory : No Calculator : None Response Time : N.A Think Time : N.A Minimum Instruction Time : 0**

**Correct Marks : 5 Wrong Marks : 1**

**Question Key Details :**

Key	Value
Comprehension	MCQ

ਭਾਰਤੀ ਸੰਵਿਧਾਨ ਦੀ ਧਾਰਾ 217 ਵਿੱਚ ਕੀ ਦਰਜ ਹੈ?

1. ਸਰਵ-ਉੱਚ ਅਦਾਲਤ ਦੇ ਜੱਜਾਂ ਦੀ ਨਿਯੁਕਤੀ ਦੀ ਪ੍ਰਕਿਰਿਆ।
2. ਉੱਚ ਅਦਾਲਤ ਦੇ ਜੱਜਾਂ ਦੀ ਨਿਯੁਕਤੀ ਦੀ ਪ੍ਰਕਿਰਿਆ।
3. ਨਿਮਨ ਨਿਆਇਕ ਦੇ ਜੱਜਾਂ ਦੀ ਨਿਯੁਕਤੀ ਦੀ ਪ੍ਰਕਿਰਿਆ।
4. ਜੱਜਾਂ ਨੂੰ ਹਟਾਉਣ ਦੀ ਪ੍ਰਕਿਰਿਆ।

**Options :**

485584135345. 1

485584135346. 2

485584135347. 3

485584135348. 4

**Question Number : 203 Question Id : 48558433838 Question Type : MCQ Option Shuffling : No Is Question Mandatory : No Calculator : None Response Time : N.A Think Time : N.A Minimum Instruction Time : 0**

**Correct Marks : 5 Wrong Marks : 1**

**Question Key Details :**

Key	Value
-----	-------

Comprehension	MCQ
---------------	-----

The doctrine of *Locus Standi* means

1. Right to respect the court
2. Right to appear before the court
3. Right to stand with the court
4. Right to seek Justice

**Options :**

485584135349. 1  
485584135350. 2  
485584135351. 3  
485584135352. 4

**Question Number : 203 Question Id : 48558433838 Question Type : MCQ Option Shuffling : No Is Question Mandatory : No Calculator : None Response Time : N.A Think Time : N.A Minimum Instruction Time : 0**

**Correct Marks : 5 Wrong Marks : 1**

**Question Key Details :**

Key	Value
Comprehension	MCQ

ਡਾਕਟਰਾਇਨ ਆਫ਼ ਲੋਕਸ ਸਟੈਂਡੀ ਦਾ ਮਤਲਬ ਹੈ:-

1. ਅਦਾਲਤ ਦਾ ਆਦਰ ਕਰਨ ਦਾ ਅਧਿਕਾਰ।
2. ਅਦਾਲਤ ਸਾਹਮਣੇ ਪੇਸ਼ ਹੋਣ ਦਾ ਅਧਿਕਾਰ।
3. ਅਦਾਲਤ ਨਾਲ ਖੜ੍ਹਨ ਦਾ ਅਧਿਕਾਰ।
4. ਨਿਆਂ ਦੀ ਭਾਲ ਦਾ ਅਧਿਕਾਰ।

**Options :**

485584135349. 1  
485584135350. 2  
485584135351. 3  
485584135352. 4

**Question Number : 204 Question Id : 48558433839 Question Type : MCQ Option Shuffling : No Is Question Mandatory : No Calculator : None Response Time : N.A Think Time : N.A Minimum Instruction Time : 0**

**Correct Marks : 5 Wrong Marks : 1**

**Question Key Details :**

Key	Value
Comprehension	MCQ

Which Article of the Constitution of India says that the advisory jurisdiction of Supreme Court can be sought by President of India?

1. Article 140
2. Article 141
3. Article 142
4. Article 143

**Options :**

- 485584135353. 1
- 485584135354. 2
- 485584135355. 3
- 485584135356. 4

**Question Number : 204 Question Id : 48558433839 Question Type : MCQ Option Shuffling : No Is Question Mandatory : No Calculator : None Response Time : N.A Think Time : N.A Minimum Instruction Time : 0**

**Correct Marks : 5 Wrong Marks : 1**

**Question Key Details :**

Key	Value
Comprehension	MCQ

ਭਾਰਤੀ ਸੰਵਿਧਾਨ ਦੀ ਕਿਹੜੀ ਧਾਰਾ ਕਹਿੰਦੀ ਹੈ ਕਿ ਸੁਪ੍ਰੀਮ ਕੋਰਟ ਦਾ ਅਧਿਕਾਰ ਖੇਤਰ ਭਾਰਤ ਦੇ ਰਾਸ਼ਟਰਪਤੀ ਦੀ ਇੱਛਾ ਮੁਤਾਬਕ ਹੋ ਸਕਦਾ ਹੈ?

1. ਧਾਰਾ 140
2. ਧਾਰਾ 141
3. ਧਾਰਾ 142
4. ਧਾਰਾ 143

**Options :**

- 485584135353. 1
- 485584135354. 2
- 485584135355. 3
- 485584135356. 4

**Question Number : 205 Question Id : 48558433840 Question Type : MCQ Option Shuffling : No Is Question Mandatory : No Calculator : None Response Time : N.A Think Time : N.A Minimum Instruction Time : 0**

**Correct Marks : 5 Wrong Marks : 1**

**Question Key Details :**

Key	Value
Comprehension	MCQ



With respect to separation of power, which of the following are true?

- A. It requires non-Harmonious relation between the legislative, Executive and Judiciary
- B. Federal Government has law making powers different than that of states or provinces
- C. It allows for liberty as it avoids concentration of powers in one branch.
- D. It promotes efficiency
- E. It facilitates checks and balances of each branch in state.

Choose the correct answer from the options given below:

- 1. B, C, D, E only
- 2. B, C, D only
- 3. C, D, E only
- 4. A, C, B only

**Options :**

- 485584135357. 1
- 485584135358. 2
- 485584135359. 3
- 485584135360. 4

**Question Number : 205 Question Id : 48558433840 Question Type : MCQ Option Shuffling : No Is Question Mandatory : No Calculator : None Response Time : N.A Think Time : N.A Minimum Instruction Time : 0**

**Correct Marks : 5 Wrong Marks : 1**

**Question Key Details :**

Key	Value
Comprehension	MCQ

ਸ਼ਕਤੀ ਦੀ ਅਲੈਹਦਗੀ ਦੇ ਸੰਬੰਧ ਵਿੱਚ, ਨਿਮਨਲਿਖਤ ਵਿੱਚੋਂ ਕਿਹੜਾ ਸਹੀ ਹੈ?

- A. ਇਸ ਵਿੱਚ ਵਿਧਾਨਪਾਲਿਕਾਂ, ਕਾਰਜਪਾਲਿਕਾ ਅਤੇ ਨਿਆਂਪਾਲਿਕਾ ਵਿਚਕਾਰ ਗੈਰ-ਸਦਭਾਵਨਾਤਮਕ ਦੀ ਜ਼ਰੂਰਤ ਹੈ।
- B. ਸੰਘੀ ਸਰਕਾਰ ਦੀ ਕਾਨੂੰਨ ਬਣਾਉਣ ਦੀ ਸ਼ਕਤੀ, ਰਾਜਾਂ ਜਾਂ ਪ੍ਰੋਵਿਨਸ ਨਾਲੋਂ ਭਿੰਨ ਹੁੰਦੀ ਹੈ।
- C. ਇਹ ਆਜ਼ਾਦੀ ਨੂੰ ਸ਼ਕਤੀ ਦੀ ਇੱਕ ਬਰਾਂਚ ਵਿੱਚ ਕੇਂਦਰਤ ਕਰਨ ਵਜੋਂ ਆਗਿਆ ਦਿੰਦਾ ਹੈ।
- D. ਇਹ ਸਮਰੱਥਾ ਨੂੰ ਉਤਸ਼ਾਹਤ ਕਰਦਾ ਹੈ।
- E. ਇਹ ਰਾਜ ਵਿੱਚ ਹਰੇਕ ਬਰਾਂਚ ਦੀ ਰੋਕ ਅਤੇ ਸੰਤੁਲਤ ਦੀ ਸਹੂਲਤ ਪ੍ਰਦਾਨ ਕਰਦਾ ਹੈ।

ਹੇਠਾਂ ਦਿੱਤੇ ਵਿਕਲਪਾਂ ਵਿੱਚੋਂ ਸਹੀ ਉੱਤਰ ਦੀ ਚੋਣ ਕਰੋ:

- 1. ਸਿਰਫ਼ B, C, D, E
- 2. ਸਿਰਫ਼ B, C, D
- 3. ਸਿਰਫ਼ C, D, E
- 4. ਸਿਰਫ਼ A, C, B

**Options :**

- 485584135357. 1
- 485584135358. 2
- 485584135359. 3

485584135360. 4

**Question Number : 206 Question Id : 48558433841 Question Type : MCQ Option Shuffling : No Is Question Mandatory : No Calculator : None Response Time : N.A Think Time : N.A Minimum Instruction Time : 0**

**Correct Marks : 5 Wrong Marks : 1**

**Question Key Details :**

Key	Value
Comprehension	MCQ

Arrange the courts of civil Judges in a district in ascending order.

- A. First class Judicial Magistrate court
- B. Second Class Judicial Magistrate court
- C. Munsiff Courts
- D. Chief Judicial Magistrate Court

Choose the correct answer from the options given below:

- 1. B, D, A, C
- 2. C, B, A, D
- 3. A, B, C, D
- 4. D, A, C, B

**Options :**

- 485584135361. 1
- 485584135362. 2
- 485584135363. 3
- 485584135364. 4

**Question Number : 206 Question Id : 48558433841 Question Type : MCQ Option Shuffling : No Is Question Mandatory : No Calculator : None Response Time : N.A Think Time : N.A Minimum Instruction Time : 0**

**Correct Marks : 5 Wrong Marks : 1**

**Question Key Details :**

Key	Value
Comprehension	MCQ

ਜ਼ਿਲ੍ਹੇ ਵਿੱਚ ਸਿਵਲ ਜੱਜਾਂ ਦੀਆਂ ਅਦਾਲਤਾਂ ਨੂੰ ਚੜ੍ਹਦੇ ਕ੍ਰਮ ਅਨੁਸਾਰ ਕਰੋ:-

- A. ਪਹਿਲੇ ਦਰਜੇ ਦੀ ਨਿਆਂਇਕ ਮੈਜਿਸਟਰੇਟ ਅਦਾਲਤ
- B. ਦੂਜੇ ਦਰਜੇ ਦੀ ਨਿਆਂਇਕ ਮੈਜਿਸਟਰੇਟ ਅਦਾਲਤ
- C. ਮੁਨਸਿਫ਼ ਅਦਾਲਤਾਂ
- D. ਮੁੱਖ ਨਿਆਂਇਕ ਮੈਜਿਸਟਰੇਟ ਅਦਾਲਤ

ਹੇਠਾਂ ਦਿੱਤੇ ਵਿਕਲਪਾਂ ਵਿੱਚੋਂ ਸਹੀ ਉੱਤਰ ਦੀ ਚੋਣ ਕਰੋ:

- 1. B, D, A, C
- 2. C, B, A, D
- 3. A, B, C, D
- 4. D, A, C, B

**Options :**

- 485584135361. 1
- 485584135362. 2
- 485584135363. 3
- 485584135364. 4

**Question Number : 207 Question Id : 48558433842 Question Type : MCQ Option Shuffling : No Is Question Mandatory : No Calculator : None Response Time : N.A Think Time : N.A Minimum Instruction Time : 0**

**Correct Marks : 5 Wrong Marks : 1**

**Question Key Details :**

Key	Value
Comprehension	MCQ

Arrange the stages of investigations initiated by police officer for the collection of evidence in order of their occurrence:

- A. Collection of evidence
- B. Ascertaining facts and circumstances
- C. Proceeding to spot
- D. Discovery and arrest of suspected offender
- E. Investigation ends in police report to magistrate

Choose the correct answer from the options given below:

- 1. C, D, B, A, E
- 2. C, B, D, A, E
- 3. B, E, A, C, D
- 4. A, B, C, D, E

**Options :**

- 485584135365. 1
- 485584135366. 2
- 485584135367. 3
- 485584135368. 4

Question Number : 207 Question Id : 48558433842 Question Type : MCQ Option Shuffling : No Is Question Mandatory : No Calculator : None Response Time : N.A Think Time : N.A Minimum Instruction Time : 0

Correct Marks : 5 Wrong Marks : 1

Question Key Details :

Key	Value
Comprehension	MCQ

ਪੁਲਿਸ ਅਫਸਰ ਦੁਆਰਾ ਸਬੂਤ ਇੱਕਤਰੀਕਰਨ ਦੀ ਜਾਂਚ ਦੇ ਪੱਧਰਾਂ ਨੂੰ ਉਨ੍ਹਾਂ ਦੇ ਵਾਪਰਨ ਕ੍ਰਮ ਵਿੱਚ ਤਰਤੀਬ ਬੱਧ ਕਰੋ:-

- ਸਬੂਤਾਂ ਦਾ ਇੱਕਤਰੀਕਰਨ
- ਤੱਥਾਂ ਅਤੇ ਹਾਲਤਾਂ ਨੂੰ ਨਿਰਧਾਰਤ ਕਰਨਾ।
- ਘਟਨਾ ਵਾਲੀ ਥਾਂ ਤੇ ਜਾਣ ਦੀ ਕਾਰਵਾਈ।
- ਸ਼ੱਕੀ ਮੁਜ਼ਰਿਮ ਦੀ ਭਾਲ ਕਰਨੀ ਅਤੇ ਗ੍ਰਿਫ਼ਤਾਰ ਕਰਨਾ।
- ਪੁਲਿਸ ਰਿਪੋਰਟ ਦੀ ਜਾਂਚ ਪੂਰੀ ਕਰਕੇ ਮੈਜਿਸਟਰੇਟ ਨੂੰ ਸੌਂਪਣੀ।

ਹੇਠਾਂ ਦਿੱਤੇ ਵਿਕਲਪਾਂ ਵਿੱਚੋਂ ਸਹੀ ਉੱਤਰ ਦੀ ਚੋਣ ਕਰੋ:

1. C, D, B, A, E
2. C, B, D, A, E
3. B, E, A, C, D
4. A, B, C, D, E

Options :

485584135365. 1
485584135366. 2
485584135367. 3
485584135368. 4

Question Number : 208 Question Id : 48558433843 Question Type : MCQ Option Shuffling : No Is Question Mandatory : No Calculator : None Response Time : N.A Think Time : N.A Minimum Instruction Time : 0

Correct Marks : 5 Wrong Marks : 1

Question Key Details :

Key	Value
Comprehension	MCQ

A women in sheer destitute and impoverishment attempted to kill herself after failing in all ways to arrange for food for her starving children. She did it knowingly therefore she will be held guilty by the Court because:

1. the act was done under compulsion
2. the act was done out of necessity
3. the act was done due to insanity
4. the act was done intentionally

Options :

485584135369. 1
485584135370. 2
485584135371. 3

485584135372. 4

**Question Number : 208 Question Id : 48558433843 Question Type : MCQ Option Shuffling : No Is Question Mandatory : No Calculator : None Response Time : N.A Think Time : N.A Minimum Instruction Time : 0**

**Correct Marks : 5 Wrong Marks : 1**

**Question Key Details :**

Key	Value
Comprehension	MCQ

ਇੱਕ ਕੰਗਾਲ ਅਤੇ ਗਰੀਬ ਔਰਤ ਆਪਣੇ ਭੁੱਖੇ ਬੱਚਿਆਂ ਨੂੰ ਭੋਜਨ ਉਪਲਬਧ ਨਾ ਕਰਵਾਉਣ ਕਰਕੇ ਆਪਣੇ-ਆਪ ਨੂੰ ਮਾਰਨ ਦੀ ਕੋਸ਼ਿਸ਼ ਕਰਦੀ ਹੈ। ਅਜਿਹਾ ਉਸ ਨੇ ਜਾਣਦੇ ਹੋਏ ਕੀਤਾ ਹੈ, ਇਸ ਲਈ ਅਦਾਲਤ ਉਸਨੂੰ ਦੇਸ਼ੀ ਮੰਨੇਗੀ ਕਿਉਂਕਿ :-

1. ਮਜ਼ਬੂਰੀ ਅਧੀਨ ਕੀਤੀ ਗਈ ਕਾਰਵਾਈ ਸੀ।
2. ਜ਼ਰੂਰਤ ਤੋਂ ਬਾਹਰ ਹੋ ਕੇ ਕੀਤੀ ਗਈ ਕਾਰਵਾਈ ਸੀ।
3. ਪਾਗਲਪਨ ਕਰਕੇ ਕੀਤੀ ਗਈ ਕਾਰਵਾਈ ।
4. ਇਰਾਦੇ ਨਾਲ ਕੀਤੀ ਗਈ ਕਾਰਵਾਈ।

**Options :**

485584135369. 1

485584135370. 2

485584135371. 3

485584135372. 4

**Question Number : 209 Question Id : 48558433844 Question Type : MCQ Option Shuffling : No Is Question Mandatory : No Calculator : None Response Time : N.A Think Time : N.A Minimum Instruction Time : 0**

**Correct Marks : 5 Wrong Marks : 1**

**Question Key Details :**

Key	Value
Comprehension	MCQ

Crime committed by structured groups typically involving the distribution of illegal goods and services to others is known as-

1. White Collar crime
2. Crime against groups
3. Organised Crimes
4. Gang War

**Options :**

485584135373. 1

485584135374. 2

485584135375. 3

485584135376. 4

**Question Number : 209 Question Id : 48558433844 Question Type : MCQ Option Shuffling : No Is Question Mandatory : No Calculator : None Response Time : N.A Think Time : N.A Minimum Instruction Time : 0**

**Correct Marks : 5 Wrong Marks : 1**

**Question Key Details :**

Key	Value
Comprehension	MCQ

ਗੈਰ-ਕਾਨੂੰਨੀ ਚੀਜ਼ਾਂ ਅਤੇ ਸੇਵਾਵਾਂ ਨੂੰ ਸੰਗਠਤ ਸਮੂਹਾਂ ਦੁਆਰਾ ਹੋਰਨਾਂ ਤੱਕ ਪਹੁੰਚਾਉਣ ਵਾਲੇ ਕੀਤੇ ਜੁਰਮ ਨੂੰ ਜਾਣਿਆ ਜਾਂਦਾ ਹੈ?

1. ਵਾਇਟ ਕਾਲਰ ਜੁਰਮ ਵਜੋਂ
2. ਸਮੂਹਾਂ ਦੇ ਵਿਰੁੱਧ ਜੁਰਮ ਵਜੋਂ
3. ਸੰਗਠਿਤ ਜੁਰਮ ਵਜੋਂ
4. ਗੈਂਗ ਵਾਰ ਵਜੋਂ

**Options :**

485584135373. 1  
 485584135374. 2  
 485584135375. 3  
 485584135376. 4

**Question Number : 210 Question Id : 48558433845 Question Type : MCQ Option Shuffling : No Is Question Mandatory : No Calculator : None Response Time : N.A Think Time : N.A Minimum Instruction Time : 0**

**Correct Marks : 5 Wrong Marks : 1**

**Question Key Details :**

Key	Value
Comprehension	MCQ

If the intention is to reap fruits from the trees, the trees would be considered

1. Immovable property
2. Movable property
3. General property
4. Intangible property

**Options :**

485584135377. 1  
 485584135378. 2  
 485584135379. 3  
 485584135380. 4

**Question Number : 210 Question Id : 48558433845 Question Type : MCQ Option Shuffling : No Is Question Mandatory : No Calculator : None Response Time : N.A Think Time : N.A Minimum Instruction Time : 0**

**Correct Marks : 5 Wrong Marks : 1**

**Question Key Details :**

Key	Value
Comprehension	MCQ

ਜੇ ਦਰੱਖਤਾਂ ਤੋਂ ਫਲ ਚੋਰੀ ਕਰਨ ਦਾ ਇਰਾਦਾ ਹੈ, ਦਰੱਖਤਾਂ ਨੂੰ ਮੰਨਿਆ ਜਾਵੇਗਾ?

1. ਅਚੱਲ ਸੰਪਤੀ
2. ਚੱਲ ਸੰਪਤੀ
3. ਆਮ ਸੰਪਤੀ
4. ਅਦਿਸ਼ ਸੰਪਤੀ

**Options :**

485584135377. 1  
485584135378. 2  
485584135379. 3  
485584135380. 4

**Question Number : 211 Question Id : 48558433846 Question Type : MCQ Option Shuffling : No Is Question Mandatory : No Calculator : None Response Time : N.A Think Time : N.A Minimum Instruction Time : 0**

**Correct Marks : 5 Wrong Marks : 1**

**Question Key Details :**

Key	Value
Comprehension	MCQ

A sells his garden as well as house through the instrument to B. whereas B, wants to retain only the house and wants to cancel the garden. B has to retain the garden if he wants the house or cancel the whole transaction.' Which of the following doctrine is applicable in this instance

1. Doctrine of lis Pendens
2. Doctrine of Suitability
3. Doctrine of Election
4. Doctrine of Exchange

**Options :**

485584135381. 1  
485584135382. 2  
485584135383. 3  
485584135384. 4

**Question Number : 211 Question Id : 48558433846 Question Type : MCQ Option Shuffling : No Is Question Mandatory : No Calculator : None Response Time : N.A Think Time : N.A Minimum Instruction Time : 0**

**Correct Marks : 5 Wrong Marks : 1**

**Question Key Details :**

Key	Value
Comprehension	MCQ

A ਆਪਣਾ ਬਾਗ, ਘਰ ਸਮੇਤ ਸਾਧਨਾ ਰਾਹੀਂ B ਨੂੰ ਵੇਚਦਾ ਹੈ। ਜਿੱਥੇ B, ਘਰ ਰੱਖਣਾ ਚਾਹੁੰਦਾ ਹੈ ਪਰ ਬਾਗ ਨੂੰ ਰੱਦ ਕਰਨਾ ਚਾਹੁੰਦਾ ਹੈ। B ਬਾਗ ਨੂੰ ਰੱਖਣਾ ਚਾਹੁੰਦਾ ਹੈ ਜੇਕਰ ਉਹ ਘਰ ਜਾਂ ਸਾਰੀ ਦੇਣਦਾਰੀ ਰੱਦ ਕਰ ਦੇਵੇ। ਇਸ ਉਦਾਹਰਣ ਵਿੱਚ ਜਿਹੜਾ ਸਿਧਾਂਤ ਲਾਗੂ ਹੋਵੇਗਾ?

1. ਲਿਸ ਪੈਂਡਿਨਸ ਸਿਧਾਂਤ
2. ਅਨੁਕੂਲਤਾ ਦਾ ਸਿਧਾਂਤ
3. ਚੋਣ ਦਾ ਸਿਧਾਂਤ
4. ਵਟਾਂਦਰੇ ਦਾ ਸਿਧਾਂਤ

**Options :**

- 485584135381. 1
- 485584135382. 2
- 485584135383. 3
- 485584135384. 4

**Question Number : 212 Question Id : 48558433847 Question Type : MCQ Option Shuffling : No Is Question Mandatory : No Calculator : None Response Time : N.A Think Time : N.A Minimum Instruction Time : 0**

**Correct Marks : 5 Wrong Marks : 1**

**Question Key Details :**

Key	Value
Comprehension	MCQ

In what kind of transfer of property, the right and liabilities of the parties to exchange shall be that of the rights and liabilities of the buyer to the extent of receiving and that of the seller to the extent of giving.

1. Gift
2. Lease
3. Exchange
4. Mortgage

**Options :**

- 485584135385. 1
- 485584135386. 2
- 485584135387. 3
- 485584135388. 4

**Question Number : 212 Question Id : 48558433847 Question Type : MCQ Option Shuffling : No Is Question Mandatory : No Calculator : None Response Time : N.A Think Time : N.A Minimum Instruction Time : 0**

**Correct Marks : 5 Wrong Marks : 1**

**Question Key Details :**

Key	Value
Comprehension	MCQ



ਸੰਪਤੀ ਦੇ ਕਿਸ ਤਰ੍ਹਾਂ ਦੇ ਤਬਦਲੇ ਵਿੱਚ ਧਿਰਾਂ ਦੇ ਅਧਿਕਾਰ ਅਤੇ ਦੇਣਦਾਰੀਆਂ ਦਾ ਖਰੀਦਦਾਰ ਦੁਆਰਾ ਆਦਾਨ ਪ੍ਰਦਾਨ ਕੀਤਾ ਜਾਵੇਗਾ ਅਤੇ ਇਸਨੂੰ ਪ੍ਰਾਪਤ ਕਰਨ ਸੰਬੰਧੀ ਵਿਕਰੇਤਾ ਦੇ ਅਧਿਕਾਰ ਅਤੇ ਦੇਣਦਾਰੀਆਂ ਕਿਸ ਹੱਦ ਤੱਕ ਹੋਣਗੀਆਂ?

1. ਤੋਹਫ਼ਾ
2. ਲੀਜ਼
3. ਵਟਾਂਦਰਾ
4. ਮਾਰਟਗੇਜ਼

**Options :**

485584135385. 1  
 485584135386. 2  
 485584135387. 3  
 485584135388. 4

**Question Number : 213 Question Id : 48558433848 Question Type : MCQ Option Shuffling : No Is Question Mandatory : No Calculator : None Response Time : N.A Think Time : N.A Minimum Instruction Time : 0**

**Correct Marks : 5 Wrong Marks : 1**

**Question Key Details :**

Key	Value
Comprehension	MCQ

Match List I with List II

LIST I		LIST II	
A.	False Imprisonment	I.	act of deliberate physical harm to victim
B.	Unlawful harassment	II.	claimant to be knowingly confined
C.	Tresspass to Chattels	III.	invade real property without claimants approval
D.	Tresspass to land	IV.	intermeddle with a chattel which was in the possession of claimant

Choose the correct answer from the options given below:

1. A-I, B-IV, C-II, D-III
2. A-II, B-I, C-IV, D-III
3. A-III, B-II, C-I, D-IV
4. A-IV, B-III, C-I, D-II

**Options :**

485584135389. 1  
 485584135390. 2  
 485584135391. 3  
 485584135392. 4

**Question Number : 213 Question Id : 48558433848 Question Type : MCQ Option Shuffling : No Is Question Mandatory : No Calculator : None Response Time : N.A Think Time : N.A Minimum Instruction Time : 0**

**Correct Marks : 5 Wrong Marks : 1**

**Question Key Details :**

Key	Value
Comprehension	MCQ

ਸੂਚੀ I ਦਾ ਸੂਚੀ II ਨਾਲ ਮਿਲਾਣ ਕਰੋ

ਸੂਚੀ I		ਸੂਚੀ II	
A.	ਗਲਤ ਜੇਲ੍ਹ	I.	ਪੀੜ੍ਹਤ ਨੂੰ ਜਾਣ ਬੁੱਝ ਕੇ ਪਹੁੰਚਾਇਆ ਨੁਕਸਾਨ।
B.	ਗੈਰਕਾਨੂੰਨੀ ਸ਼ੋਸਣ	II.	ਜਾਣ ਬੁੱਝ ਕੇ ਸੀਮਤ ਕਰਨ ਦਾ ਦਾਅਵਾ ਕਰਨਾ।
C.	ਚੈਟਲਜ਼ ਦੀ ਉਲੰਘਣਾ	III.	ਦਾਅਵੇਦਾਰ ਦੀ ਮਨਜ਼ੂਰੀ ਤੋਂ ਬਿਨਾਂ ਸੰਪਤੀ ਤੇ ਅਧਿਕਾਰ ਕਰਨਾ।
D.	ਜ਼ਮੀਨ ਦੀ ਉਲੰਘਣਾ	IV.	ਇੱਕ ਚੈਟਲ ਨਾਲ ਦਖਲ ਦੇਣਾ ਜੋ ਦਾਅਵੇਦਾਰ ਦੇ ਕਬਜ਼ੇ ਵਿੱਚ ਸੀ।

ਹੇਠਾਂ ਦਿੱਤੇ ਵਿਕਲਪਾਂ ਵਿੱਚੋਂ ਸਹੀ ਉੱਤਰ ਦੀ ਚੋਣ ਕਰੋ:

1. A-I, B-IV, C-II, D-III
2. A-II, B-I, C-IV, D-III
3. A-III, B-II, C-I, D-IV
4. A-IV, B-III, C-I, D-II

**Options :**

485584135389. 1  
485584135390. 2  
485584135391. 3  
485584135392. 4

**Question Number : 214 Question Id : 48558433849 Question Type : MCQ Option Shuffling : No Is Question Mandatory : No Calculator : None Response Time : N.A Think Time : N.A Minimum Instruction Time : 0**

**Correct Marks : 5 Wrong Marks : 1**

**Question Key Details :**

Key	Value
Comprehension	MCQ

The principle of "Duty of Care" is explained in which case:-

1. Donoghue v. Stevenson
2. Rylands v. Fletcher
3. Ashby v. White
4. M.C. Mehta v. Union of India

**Options :**

485584135393. 1  
485584135394. 2  
485584135395. 3  
485584135396. 4

Question Number : 214 Question Id : 48558433849 Question Type : MCQ Option Shuffling : No Is Question Mandatory : No Calculator : None Response Time : N.A Think Time : N.A Minimum Instruction Time : 0

Correct Marks : 5 Wrong Marks : 1

Question Key Details :

Key	Value
Comprehension	MCQ

" ਡਿਊਟੀ ਆਫ ਕੇਅਰ " ਦਾ ਸਿਧਾਂਤ ਦੀ ਵਿਆਖਿਆ ਕਿਹੜੇ ਕੇਸ ਵਿੱਚ ਕੀਤੀ ਗਈ :-

1. ਡੋਨੋਗਹਿਊ ਬਨਾਮ ਸਟੀਵਨਸਨ
2. ਰੇਲੈਂਡ ਬਨਾਮ ਫਲੇਚਰ
3. ਅਸ਼ਬੇ ਬਨਾਮ ਵਾਈਟ
4. ਐਮ. ਸੀ. ਮਹਿਤਾ ਬਨਾਮ ਭਾਰਤੀ ਸੰਘ

Options :

- 485584135393. 1
- 485584135394. 2
- 485584135395. 3
- 485584135396. 4

Question Number : 215 Question Id : 48558433850 Question Type : MCQ Option Shuffling : No Is Question Mandatory : No Calculator : None Response Time : N.A Think Time : N.A Minimum Instruction Time : 0

Correct Marks : 5 Wrong Marks : 1

Question Key Details :

Key	Value
Comprehension	MCQ

A contract without consideration is

1. valid
2. Void
3. Voidable
4. Void ab initio

Options :

- 485584135397. 1
- 485584135398. 2
- 485584135399. 3
- 485584135400. 4

Question Number : 215 Question Id : 48558433850 Question Type : MCQ Option Shuffling : No Is Question Mandatory : No Calculator : None Response Time : N.A Think Time : N.A Minimum Instruction Time : 0

Correct Marks : 5 Wrong Marks : 1

Question Key Details :

Key	Value
Comprehension	MCQ

ਵਿਚਾਰਨ ਤੋਂ ਬਿਨ੍ਹਾਂ ਸਮਝੌਤਾ ਹੈ:-

1. ਜਾਇਜ਼
2. ਨਜਾਇਜ਼
3. ਰੱਦ
4. ਨਜਾਇਜ਼ ਅਬ ਇਨੀਟੀਓ

**Options :**

485584135397. 1  
485584135398. 2  
485584135399. 3  
485584135400. 4

**Question Number : 216 Question Id : 48558433851 Question Type : MCQ Option Shuffling : No Is Question Mandatory : No Calculator : None Response Time : N.A Think Time : N.A Minimum Instruction Time : 0**

**Correct Marks : 5 Wrong Marks : 1**

**Question Key Details :**

Key	Value
Comprehension	MCQ

A contract can be enforced before the court only if it creates legal obligation among the parties. In light of the statement choose the correct answer:

- A. An agreement entered into with a minor is enforceable in exceptional circumstance
- B. An agreement entered between husband and wife cannot be enforced in the court
- C. An agreement with inadequate consideration is a voidable agreement
- D. A promise without consideration can create a valid contract
- E. An agreement with an intoxicated person cannot be called as contract

Choose the correct answer from the options given below:

1. A, B, D only
2. B and E only
3. C, D and E only
4. A, C and D only

**Options :**

485584135401. 1  
485584135402. 2  
485584135403. 3  
485584135404. 4

**Question Number : 216 Question Id : 48558433851 Question Type : MCQ Option Shuffling : No Is Question Mandatory : No Calculator : None Response Time : N.A Think Time : N.A Minimum Instruction Time : 0**

**Correct Marks : 5 Wrong Marks : 1**

**Question Key Details :**

Key	Value
Comprehension	MCQ

ਇੱਕ ਸਮਝੌਤਾ ਆਦਾਲਤ ਦੇ ਸਾਹਮਣੇ ਉਦੋਂ ਰੱਖਿਆ ਜਾ ਸਕਦਾ ਹੈ, ਜਦੋਂ ਧਿਰਾਂ ਵਿਚਕਾਰ ਕਾਨੂੰਨੀ ਉਲਝਣਾ ਪੈਂਦਾ ਹੁੰਦੀਆਂ ਹਨ। ਇਸ ਕਥਨ ਦੀ ਰੋਸ਼ਨੀ ਵਿੱਚ ਸਹੀ ਉੱਤਰ ਦੀ ਚੋਣ ਕਰੋ:-

- ਚੋਣਵੇਂ ਹਾਲਤਾਂ ਵਿੱਚ ਇੱਕ ਸਮਝੌਤਾ ਬਾਲਗ ਨਾਲ ਜ਼ਬਰਦਸਤੀ ਦਾਖ਼ਲ ਹੁੰਦਾ ਹੈ।
- ਪਤੀ ਅਤੇ ਪਤਨੀ ਵਿਚਕਾਰ ਹੋਇਆ ਸਮਝੌਤਾ ਆਦਾਲਤ ਵਿੱਚ ਪੇਸ਼ ਨਹੀਂ ਕੀਤਾ ਜਾ ਸਕਦਾ।
- ਅਢੁਕਵੀਂ ਵਿਚਾਰ ਨਾਲ ਕੀਤਾ ਗਿਆ ਸਮਝੌਤਾ ਨਜ਼ਾਇਜ਼ ਸਮਝੌਤਾ ਹੈ।
- ਬਿਨ੍ਹਾਂ ਵਿਚਾਰੇ ਕੀਤਾ ਗਿਆ ਵਾਅਦਾ, ਜਾਇਜ਼ ਸਮਝੌਤਾ ਬਣ ਸਕਦਾ ਹੈ।
- ਇੱਕ ਨਸ਼ੇੜੀ ਨਾਲ ਕੀਤਾ ਗਿਆ ਸਮਝੌਤਾ, ਸਮਝੌਤਾ ਨਹੀਂ ਕਿਹਾ ਜਾ ਸਕਦਾ।

ਹੇਠਾਂ ਦਿੱਤੇ ਵਿਕਲਪਾਂ ਵਿੱਚੋਂ ਸਹੀ ਉੱਤਰ ਦੀ ਚੋਣ ਕਰੋ:

- ਸਿਰਫ਼ A, B, D
- ਸਿਰਫ਼ B ਅਤੇ E
- ਸਿਰਫ਼ C, D ਅਤੇ E
- ਸਿਰਫ਼ A, C ਅਤੇ D

**Options :**

485584135401. 1
485584135402. 2
485584135403. 3
485584135404. 4

**Question Number : 217 Question Id : 48558433852 Question Type : MCQ Option Shuffling : No Is Question Mandatory : No Calculator : None Response Time : N.A Think Time : N.A Minimum Instruction Time : 0**

**Correct Marks : 5 Wrong Marks : 1**

**Question Key Details :**

Key	Value
Comprehension	MCQ

Match List I with List II

LIST I		LIST II	
A.	Novation	I.	Terms of contract of modified
B.	Rescission	II.	New contract is substituted for an old contract
C.	Waiver	III.	Certain or all terms of contract are cancelled
D.	Alteration	IV.	Parties to a contract abandon their mutual rights

Choose the correct answer from the options given below:

- A-II, B-III, C-IV, D-I
- A-II, B-I, C-III, D-IV
- A-I, B-III, C-IV, D-II
- A-III, B-II, C-IV, D-I

**Options :**

485584135405. 1  
 485584135406. 2  
 485584135407. 3  
 485584135408. 4

**Question Number : 217 Question Id : 48558433852 Question Type : MCQ Option Shuffling : No Is Question Mandatory : No Calculator : None Response Time : N.A Think Time : N.A Minimum Instruction Time : 0**

**Correct Marks : 5 Wrong Marks : 1**

**Question Key Details :**

Key	Value
Comprehension	MCQ

**ਸੂਚੀ I ਦਾ ਸੂਚੀ II ਨਾਲ ਮਿਲਾਣ ਕਰੋ**

ਸੂਚੀ I		ਸੂਚੀ II	
A.	ਨਵੀਨਤਾ	I.	ਦਰੁਸਤ ਕੀਤੇ ਸਮਝੌਤੇ ਦੀਆਂ ਸ਼ਰਤਾਂ
B.	ਰੱਦ ਕਰਨਾ	II.	ਪੁਰਾਣੇ ਸਮਝੌਤੇ ਦੇ ਬਦਲ ਵਜੋਂ ਨਵੇਂ ਸਮਝੌਤੇ ਦੀ ਉਸਾਰੀ
C.	ਛੋਟ	III.	ਸੀਮਤ ਜਾਂ ਸਮਝੌਤੇ ਦੀਆਂ ਸ਼ਾਰੀਆਂ ਸ਼ਰਤਾਂ ਰੱਦ।
D.	ਤਬਦੀਲੀ	IV.	ਸਾਝੇ ਅਧਿਕਾਰਾਂ ਨਾਲ ਧਿਰਾਂ ਦੁਆਰਾ ਸਮਝੌਤੇ ਦਾ ਤਿਆਗ

**ਹੇਠਾਂ ਦਿੱਤੇ ਵਿਕਲਪਾਂ ਵਿੱਚੋਂ ਸਹੀ ਉੱਤਰ ਦੀ ਚੋਣ ਕਰੋ:**

1. A-II, B-III, C-IV, D-I
2. A-II, B-I, C-III, D-IV
3. A-I, B-III, C-IV, D-II
4. A-III, B-II, C-IV, D-I

**Options :**

485584135405. 1  
 485584135406. 2  
 485584135407. 3  
 485584135408. 4

**Question Number : 218 Question Id : 48558433853 Question Type : MCQ Option Shuffling : No Is Question Mandatory : No Calculator : None Response Time : N.A Think Time : N.A Minimum Instruction Time : 0**

**Correct Marks : 5 Wrong Marks : 1**

**Question Key Details :**

Key	Value
Comprehension	MCQ

'A' agrees to supply 200 liters of oil to 'B' on 1st February 2023. The contract was entered between the two on 15th January 2023. On 31st January 2023, 'A' informed 'B' that the consignment has been dispatched and would reach 'B' on scheduled date. On 1st Feb 2023, 'B' refused to accept the oil as he did not have sufficient space to store the oil.

What is the remedy available with 'A'?

1. No remedy as the contract is discharged by impossibility of performance
2. No remedy is available as 'A' will get back his goods, so has not suffered any loss
3. 'A' is entitled to receive compensation from 'B' for breach of contract
4. 'A' can wait till 'B' arrange for warehouse

**Options :**

485584135409. 1  
 485584135410. 2  
 485584135411. 3  
 485584135412. 4

**Question Number : 218 Question Id : 48558433853 Question Type : MCQ Option Shuffling : No Is Question Mandatory : No Calculator : None Response Time : N.A Think Time : N.A Minimum Instruction Time : 0**

**Correct Marks : 5 Wrong Marks : 1**

**Question Key Details :**

Key	Value
Comprehension	MCQ

'A' ਨੇ 1st ਫ਼ਰਵਰੀ 2023 ਨੂੰ 'B' ਲਈ 200 ਲੀਟਰ ਤੇਲ ਦੀ ਸਪਲਾਈ ਲਈ ਸਹਿਮਤ ਹੋਇਆ। 15th ਜਨਵਰੀ 2023 ਨੂੰ ਦੋਵਾਂ ਧਿਰਾਂ ਵਿਚਕਾਰ ਸਮਝੌਤਾ ਹੋਇਆ। 31st ਜਨਵਰੀ 2023 ਨੂੰ 'A' 'B' ਨੂੰ ਸੂਚਿਤ ਕਰਦਾ ਹੈ ਕਿ ਖੋਪ ਭੇਜ ਦਿੱਤੀ ਗਈ ਹੈ ਅਤੇ 'B' ਕੋਰ ਨਿਰਧਾਰਤ ਤਾਰੀਖ ਨੂੰ ਪਹੁੰਚ ਜਾਵੇਗੀ। 1st ਫ਼ਰਵਰੀ 2023 ਨੂੰ 'B' ਇਸ ਤੇਲ ਨੂੰ ਸਵੀਕਾਰ ਕਰਨ ਤੋਂ ਮਨ੍ਹਾਂ ਕਰ ਦਿੰਦਾ ਹੈ ਕਿ ਉਸ ਕੋਲ ਇਸਨੂੰ ਰੱਖਣ ਲਈ ਥਾਂ ਨਹੀਂ ਹੈ।

'A' ਕੋਲ ਕਿਸ ਪ੍ਰਕਾਰ ਦਾ ਮੁਆਵਜ਼ਾ ਉਪਲਬਧ ਹੈ?

1. ਪ੍ਰਦਰਸ਼ਨ ਦੀ ਅਸੰਭਵਤਾਂ ਦੁਆਰਾ ਇਕਰਾਰਨਾਮਾ ਰੱਦ ਕਰਨ ਕਰਕੇ ਕੋਈ ਮੁਆਵਜ਼ਾ ਨਹੀਂ।
2. ਕੋਈ ਮੁਆਵਜ਼ਾ ਉਪਲਬਧ ਨਹੀਂ ਜਿਵੇਂ 'A' ਆਪਣੀ ਵਸਤੂ ਵਾਪਸ ਲਵੇਗਾ, ਇਸ ਤਰ੍ਹਾਂ ਕੋਈ ਘਾਟਾ ਨਹੀਂ ਸਹੇਗਾ।
3. 'A' 'B' ਤੋਂ ਸਮਝੌਤੇ ਦੇ ਟੁੱਟਣ ਦੇ ਇਵਜ਼ ਵਜੋਂ ਮੁਆਵਜ਼ੇ ਦੀ ਪ੍ਰਤੀ-ਪੂਰਤੀ ਦਾ ਹੱਕਦਾਰ ਹੋਵੇਗਾ।
4. 'A' ਇੰਤਜ਼ਾਰ ਕਰ ਸਕਦਾ ਹੈ ਜਦੋਂ ਤੱਕ 'B' ਗੋਦਾਮ ਦਾ ਪ੍ਰਬੰਧ ਨਾ ਕਰ ਲਵੇ।

**Options :**

485584135409. 1  
 485584135410. 2  
 485584135411. 3  
 485584135412. 4

**Question Number : 219 Question Id : 48558433854 Question Type : MCQ Option Shuffling : No Is Question Mandatory : No Calculator : None Response Time : N.A Think Time : N.A Minimum Instruction Time : 0**

**Correct Marks : 5 Wrong Marks : 1**

**Question Key Details :**

Key	Value
Comprehension	MCQ

Which of the given statements is NOT correct for the Tribunals as a dispute resolution institution?

1. The 42nd Amendment Act empowered the Parliament to set up tribunals for adjudication of specialised disputes
2. The tribunals are meant to replace the courts as the courts are over burdened with pendency of cases.
3. The decisions of the tribunals could be scrutinised by the division of High Courts
4. Regulations oversee the law and order compliance by the tribunals in the relevant government sector.

**Options :**

485584135413. 1  
485584135414. 2  
485584135415. 3  
485584135416. 4

**Question Number : 219 Question Id : 48558433854 Question Type : MCQ Option Shuffling : No Is Question Mandatory : No Calculator : None Response Time : N.A Think Time : N.A Minimum Instruction Time : 0**

**Correct Marks : 5 Wrong Marks : 1**

**Question Key Details :**

Key	Value
Comprehension	MCQ

ਝਗੜਾ ਨਿਵਾਰਣ ਸੰਸਥਾ ਵਜੋਂ ਟ੍ਰਿਬਿਊਨਲ ਲਈ ਕਿਹੜਾ ਸਹੀ ਨਹੀਂ ਹੈ?

1. ਪਦਵੀਂ ਸੋਧ ਪਾਰਲੀਮੈਂਟ ਨੂੰ ਵਿਸ਼ੇਸ਼ ਝਗੜਿਆਂ ਦੇ ਨਿਆਂਇਕ ਟ੍ਰਿਬਿਊਨਲ ਸਥਾਪਤ ਕਰਨ ਦੀ ਸ਼ਕਤੀ ਦਿੰਦੀ ਹੈ।
2. ਟ੍ਰਿਬਿਊਨਲ ਦਾ ਮਤਲਬ ਅਦਾਲਤਾਂ ਨੂੰ ਬਦਲੀ ਕਰਨਾ ਹੈ, ਕਿਉਂਕਿ ਅਦਾਲਤਾਂ ਉੱਪਰ ਲਟਕਦੇ ਕੇਸਾਂ ਦਾ ਭਾਰ ਕਾਫ਼ੀ ਹੈ।
3. ਉੱਚ ਅਦਾਲਤਾਂ ਦੀ ਵੰਡ ਦੁਆਰਾ ਟ੍ਰਿਬਿਊਨਲਜ਼ ਦੇ ਫੈਸਲਿਆਂ ਦੀ ਜਾਂਚ ਕੀਤੀ ਜਾਵੇਗੀ।
4. ਸਰਕਾਰੀ ਖੇਤਰ ਵਿੱਚ ਸੰਬੰਧਤ ਨਿਯਮ ਦੁਆਰਾ ਕਾਨੂੰਨ ਅਤੇ ਵਿਵਸਥਾ ਦੀ ਪਾਲਣਾ ਦੀ ਨਿਗਰਾਨੀ ਕਰਦੇ ਹਨ।

**Options :**

485584135413. 1  
485584135414. 2  
485584135415. 3  
485584135416. 4

**Question Number : 220 Question Id : 48558433855 Question Type : MCQ Option Shuffling : No Is Question Mandatory : No Calculator : None Response Time : N.A Think Time : N.A Minimum Instruction Time : 0**

**Correct Marks : 5 Wrong Marks : 1**

**Question Key Details :**

Key	Value
Comprehension	MCQ



Choose the correct statements

- A. The 42nd Amendment Act ushered the era of Human Rights in India
- B. The 42nd Amendment Act 1976 added Articles 323 A and 323 B to the Constitution of India
- C. Administrative Tribunals Act 1985 was enacted to cater the needs of SC/ST/OBC people.
- D. In L Chandra Kumar case, the seven judge bench of the Supreme Court held that tribunals would not take away the exclusive jurisdiction of the courts.

Choose the correct answer from the options given below:

- 1. A, B, C only
- 2. B and C only
- 3. B and D only
- 4. C and D only

**Options :**

- 485584135417. 1
- 485584135418. 2
- 485584135419. 3
- 485584135420. 4

**Question Number : 220 Question Id : 48558433855 Question Type : MCQ Option Shuffling : No Is Question Mandatory : No Calculator : None Response Time : N.A Think Time : N.A Minimum Instruction Time : 0**

**Correct Marks : 5 Wrong Marks : 1**

**Question Key Details :**

Key	Value
Comprehension	MCQ

ਸਹੀ ਕਥਨ ਦੀ ਚੁਣੋ:-

- A. 42ਵੀ ਸੇਧ ਦਾ ਕਾਨੂੰਨ ਭਾਰਤ ਵਿੱਚ ਮਨੁੱਖੀ ਅਧਿਕਾਰਾਂ ਦੇ ਯੁੱਗ ਦੀ ਸ਼ੁਰੂਆਤ ਕਰਦੀ ਹੈ।
- B. 42ਵੀ ਸੇਧ ਦਾ ਕਾਨੂੰਨ 1976 ਸੰਵਿਧਾਨ ਵਿਚ ਧਾਰਾ 323 A ਅਤੇ 323 B ਸ਼ਾਮਿਲ ਕਰਦੀ ਹੈ।
- C. ਪ੍ਰਸ਼ਾਸਕੀ ਟ੍ਰਿਬਿਊਨਲ ਕਾਨੂੰਨ 1985 ਐਸ. ਸੀ / ਐਸ. ਟੀ / ਓ. ਬਿ. ਸੀ. ਲੋਕਾਂ ਦੀ ਲੋੜ ਦੀ ਦੇਖਭਾਲ ਕਰਨਾ ਸੀ।
- D. ਐਲ. ਚੰਦਰਾ ਕੁਮਾਰ ਦੇ ਕੇਸ ਵਿੱਚ, ਸਰਵ-ਉਚ ਅਦਾਲਤ ਦੇ ਸੱਤ ਜੱਜਾਂ ਦੇ ਬੈਂਚ ਨੇ ਕਿਹਾ ਕਿ ਟ੍ਰਿਬਿਊਨਲ, ਅਦਾਲਤਾਂ ਦੇ ਵਿਸ਼ੇਸ਼ ਅਧਿਕਾਰ ਖੇਤਰਾਂ ਤੋਂ ਦੂਰ ਨਹੀਂ ਲੈ ਕੇ ਜਾਣਗੇ।

ਹੇਠਾਂ ਦਿੱਤੇ ਵਿਕਲਪਾਂ ਵਿੱਚੋਂ ਸਹੀ ਉੱਤਰ ਦੀ ਚੋਣ ਕਰੋ:

- 1. ਸਿਰਫ਼ A, B, C
- 2. ਸਿਰਫ਼ B ਅਤੇ C
- 3. ਸਿਰਫ਼ B ਅਤੇ D
- 4. ਸਿਰਫ਼ C ਅਤੇ D

**Options :**

- 485584135417. 1
- 485584135418. 2
- 485584135419. 3
- 485584135420. 4

**Question Number : 221 Question Id : 48558433856 Question Type : MCQ Option Shuffling : No Is Question Mandatory : No Calculator : None Response Time : N.A Think Time : N.A Minimum Instruction Time : 0 Correct Marks : 5 Wrong Marks : 1**

**Question Key Details :**

Key	Value
Comprehension	MCQ

Central Vigilance Commission (CVC) was set up on the recommendation of which Committee:

1. Narsimhan Committee
2. Verma Committee
3. Tiwari Committee
4. Santhanam Committee

**Options :**

485584135421. 1  
485584135422. 2  
485584135423. 3  
485584135424. 4

**Question Number : 221 Question Id : 48558433856 Question Type : MCQ Option Shuffling : No Is Question Mandatory : No Calculator : None Response Time : N.A Think Time : N.A Minimum Instruction Time : 0 Correct Marks : 5 Wrong Marks : 1**

**Question Key Details :**

Key	Value
Comprehension	MCQ

ਕੇਂਦਰੀ ਵਿਜੀਲੈਂਸ ਆਯੋਗ (cvc) ਕਿਹੜੀ ਕਮੇਟੀ ਦੀਆਂ ਸਿਫਾਰਿਸ਼ਾਂ ਤੇ ਸਥਾਪਿਤ ਕੀਤਾ ਗਿਆ।

1. ਨਰਸਿਮਾ ਕਮੇਟੀ
2. ਵਰਮਾ ਕਮੇਟੀ
3. ਤਿਵਾਰੀ ਕਮੇਟੀ
4. ਸੰਥਾਨਮ ਕਮੇਟੀ

**Options :**

485584135421. 1  
485584135422. 2  
485584135423. 3  
485584135424. 4

**Question Number : 222 Question Id : 48558433857 Question Type : MCQ Option Shuffling : No Is Question Mandatory : No Calculator : None Response Time : N.A Think Time : N.A Minimum Instruction Time : 0 Correct Marks : 5 Wrong Marks : 1**

**Question Key Details :**

Key	Value
Comprehension	MCQ

ADR methods are \_\_\_\_\_ when compared to conventional Judicial Procedure.

1. Speedier, Informal and cheaper
2. Speedier, formal and costly
3. Formal, cheaper and slow
4. Slow, cheaper and informal

**Options :**

485584135425. 1  
485584135426. 2  
485584135427. 3  
485584135428. 4

**Question Number : 222 Question Id : 48558433857 Question Type : MCQ Option Shuffling : No Is Question Mandatory : No Calculator : None Response Time : N.A Think Time : N.A Minimum Instruction Time : 0**

**Correct Marks : 5 Wrong Marks : 1**

**Question Key Details :**

Key	Value
Comprehension	MCQ

ADR ਵਿਧੀਆਂ \_\_\_\_\_ ਹਨ ਜਦੋਂ ਰਿਵਾਇਤੀ ਨਿਆਂਇਕ ਪ੍ਰਕਿਰਿਆ ਨਾਲ ਤੁਲਨਾ ਕੀਤੀ ਗਈ?

1. ਤੇਜ਼, ਗੈਰਰਸਮੀ ਅਤੇ ਸਸਤੀ
2. ਤੇਜ਼, ਰਸਮੀ ਅਤੇ ਮਹਿੰਗੀ
3. ਰਸਮੀ, ਸਸਤੀ ਅਤੇ ਹੌਲੀ
4. ਸਸਤੀ, ਹੌਲੀ ਅਤੇ ਗੈਰਰਸਮੀ

**Options :**

485584135425. 1  
485584135426. 2  
485584135427. 3  
485584135428. 4

**Question Number : 223 Question Id : 48558433858 Question Type : MCQ Option Shuffling : No Is Question Mandatory : No Calculator : None Response Time : N.A Think Time : N.A Minimum Instruction Time : 0**

**Correct Marks : 5 Wrong Marks : 1**

**Question Key Details :**

Key	Value
Comprehension	MCQ

The first Lok Adalat was held in India in Junagarh in Gujarat on:-

1. 14 March 1982
2. 15 March 1982
3. 14 May 1982
4. 15 April 1982

**Options :**

485584135429. 1  
485584135430. 2  
485584135431. 3  
485584135432. 4

**Question Number : 223 Question Id : 48558433858 Question Type : MCQ Option Shuffling : No Is Question Mandatory : No Calculator : None Response Time : N.A Think Time : N.A Minimum Instruction Time : 0**

**Correct Marks : 5 Wrong Marks : 1**

**Question Key Details :**

Key	Value
Comprehension	MCQ

ਭਾਰਤ ਦੀ ਪਹਿਲੀ ਅਦਾਲਤ ਗੁਜਰਾਤ ਦੇ ਜੁਨਾਗੜ੍ਹ ਵਿੱਚ ਹੋਈ ਸੀ:-

1. 14 ਮਾਰਚ 1982
2. 15 ਮਾਰਚ 1982
3. 14 ਮਈ 1982
4. 15 ਅਪ੍ਰੈਲ 1982

**Options :**

485584135429. 1  
485584135430. 2  
485584135431. 3  
485584135432. 4

**Question Number : 224 Question Id : 48558433859 Question Type : MCQ Option Shuffling : No Is Question Mandatory : No Calculator : None Response Time : N.A Think Time : N.A Minimum Instruction Time : 0**

**Correct Marks : 5 Wrong Marks : 1**

**Question Key Details :**

Key	Value
Comprehension	MCQ

The Vedic age in India, witnessed specialised tribunal for settling disputes of family, community, tribe, caste and races.

Identify the name of the tribunal.

1. Kula
2. Shreni
3. Puga
4. Panchayat

**Options :**

485584135433. 1  
485584135434. 2  
485584135435. 3  
485584135436. 4

**Question Number : 224 Question Id : 48558433859 Question Type : MCQ Option Shuffling : No Is Question Mandatory : No Calculator : None Response Time : N.A Think Time : N.A Minimum Instruction Time : 0**

**Correct Marks : 5 Wrong Marks : 1**

**Question Key Details :**

Key	Value
Comprehension	MCQ

ਭਾਰਤ ਵਿੱਚ ਵੈਦਿਕ ਕਾਲ, ਪਰਿਵਾਰ, ਸਮਾਜ, ਕਬੀਲਾ, ਜਾਤ ਅਤੇ ਨਸਲਾਂ ਦੇ ਝਗੜੇ ਨੂੰ ਸੁਲਝਾਉਣ ਲਈ ਵਿਸ਼ੇਸ਼ ਟ੍ਰਿਬਿਊਨਲ ਦਾ ਗਵਾਹ ਹੈ।

ਟ੍ਰਿਬਿਊਨਲ ਦਾ ਨਾਮ ਪਛਾਣੋ।

1. ਕੁਲਾ
2. ਸ਼ਰੇਨੀ
3. ਪੁਗਾ
4. ਪੰਚਾਇਤ

**Options :**

485584135433. 1  
485584135434. 2  
485584135435. 3  
485584135436. 4

**Question Number : 225 Question Id : 48558433860 Question Type : MCQ Option Shuffling : No Is Question Mandatory : No Calculator : None Response Time : N.A Think Time : N.A Minimum Instruction Time : 0**

**Correct Marks : 5 Wrong Marks : 1**

**Question Key Details :**

Key	Value
Comprehension	MCQ

According to Preamble of Indian Constitution secures to all its citizen:

- A. Secularism
- B. Justice
- C. Socialism
- D. Fraternity
- E. Sovereignty

Choose the correct answer from the options given below:

1. A, B only
2. B, D only
3. D, E only
4. A, C only

**Options :**

- 485584135437. 1
- 485584135438. 2
- 485584135439. 3
- 485584135440. 4

**Question Number : 225 Question Id : 48558433860 Question Type : MCQ Option Shuffling : No Is Question Mandatory : No Calculator : None Response Time : N.A Think Time : N.A Minimum Instruction Time : 0**

**Correct Marks : 5 Wrong Marks : 1**

**Question Key Details :**

Key	Value
Comprehension	MCQ

ਭਾਰਤੀ ਸੰਵਿਧਾਨ ਦੀ ਪ੍ਰਸਤਾਵਨਾ ਮੁਤਾਬਕ ਸੰਵਿਧਾਨ ਸਾਰੇ ਨਾਗਰਿਕਾਂ ਦੀ ਸੁਰੱਖਿਆ ਕਰਦਾ ਹੈ:-

- A. ਧਰਮ ਨਿਰਪੱਖਤਾ
- B. ਨਿਆਂ
- C. ਸਮਾਜਵਾਦ
- D. ਭਾਈਚਾਰਾ
- E. ਪ੍ਰਭੂਸੱਤਾ

ਹੇਠਾਂ ਦਿੱਤੇ ਵਿਕਲਪਾਂ ਵਿੱਚੋਂ ਸਹੀ ਉੱਤਰ ਦੀ ਚੋਣ ਕਰੋ:

1. ਸਿਰਫ਼ A, B
2. ਸਿਰਫ਼ B, D
3. ਸਿਰਫ਼ D, E
4. ਸਿਰਫ਼ A, C

**Options :**

- 485584135437. 1
- 485584135438. 2
- 485584135439. 3

485584135440. 4

**Question Number : 226 Question Id : 48558433861 Question Type : MCQ Option Shuffling : No Is Question Mandatory : No Calculator : None Response Time : N.A Think Time : N.A Minimum Instruction Time : 0**

**Correct Marks : 5 Wrong Marks : 1**

**Question Key Details :**

Key	Value
Comprehension	MCQ

LAMP (Legislative Assistants to Members of Parliament) fellowship program, provides fellowship to law students interested in public policy. This (LAMP) program is run by:

1. Competition Commission of India
2. Bar Council of India
3. Securities and Exchange Board of India
4. PRS Legislative Research

**Options :**

- 485584135441. 1
- 485584135442. 2
- 485584135443. 3
- 485584135444. 4

**Question Number : 226 Question Id : 48558433861 Question Type : MCQ Option Shuffling : No Is Question Mandatory : No Calculator : None Response Time : N.A Think Time : N.A Minimum Instruction Time : 0**

**Correct Marks : 5 Wrong Marks : 1**

**Question Key Details :**

Key	Value
Comprehension	MCQ

ਲੈੱਪ ( ਪਾਰਲੀਮੈਂਟ ਦੇ ਮੈਂਬਰਾਂ ਲਈ ਵਿਧਾਨਕ ਸਹਾਇਤਾ ) ਫੈਲੋਸ਼ਿਪ ਪ੍ਰੋਗਰਾਮ, ਲੋਕ ਨੀਤੀ ਵਿੱਚ ਰੁਚੀ ਰੱਖਣ ਵਾਲੇ ਕਾਨੂੰਨ ਦੇ ਵਿਦਿਆਰਥੀਆਂ ਲਈ ਫੈਲੋਸ਼ਿਪ ਪ੍ਰਦਾਨ ਕਰਦੀ ਹੈ। ਇਹ ( ਲੈੱਪ ) ਪ੍ਰੋਗਰਾਮ ਚਲਾਇਆ ਜਾਂਦਾ ਹੈ:-

1. ਮੁਕਾਬਲਾ ਕਮਿਸ਼ਨ ਆਫ਼ ਇੰਡੀਆ
2. ਬਾਰ ਕੌਂਸਲ ਆਫ਼ ਇੰਡੀਆ
3. ਸੇਬੀ
4. ਪੀ. ਆਰ. ਐਸ. ਵਿਧਾਨਕ ਖੋਜ

**Options :**

- 485584135441. 1
- 485584135442. 2
- 485584135443. 3
- 485584135444. 4

**Question Number : 227 Question Id : 48558433862 Question Type : MCQ Option Shuffling : No Is Question Mandatory : No Calculator : None Response Time : N.A Think Time : N.A Minimum Instruction Time : 0**

**Correct Marks : 5 Wrong Marks : 1**

**Question Key Details :**

Key	Value
Comprehension	MCQ

In 1987, the first National Law School of India was set up in:

1. Jodhpur
2. Kolkata
3. Bangalore
4. Patna

**Options :**

- 485584135445. 1
- 485584135446. 2
- 485584135447. 3
- 485584135448. 4

**Question Number : 227 Question Id : 48558433862 Question Type : MCQ Option Shuffling : No Is Question Mandatory : No Calculator : None Response Time : N.A Think Time : N.A Minimum Instruction Time : 0**

**Correct Marks : 5 Wrong Marks : 1**

**Question Key Details :**

Key	Value
Comprehension	MCQ

1987 ਵਿੱਚ ਭਾਰਤ ਦਾ ਪਹਿਲਾਂ ਰਾਸ਼ਟਰੀ ਕਾਨੂੰਨ ਸਕੂਲ ਸਥਾਪਤ ਕੀਤਾ ਗਿਆ:-

1. ਜੋਧਪੁਰ
2. ਕੋਲਕਾਤਾ
3. ਬੰਗਲੌਰ
4. ਪਟਨਾ

**Options :**

- 485584135445. 1
- 485584135446. 2
- 485584135447. 3
- 485584135448. 4

**Question Number : 228 Question Id : 48558433863 Question Type : MCQ Option Shuffling : No Is Question Mandatory : No Calculator : None Response Time : N.A Think Time : N.A Minimum Instruction Time : 0**

**Correct Marks : 5 Wrong Marks : 1**

**Question Key Details :**

Key	Value
Comprehension	MCQ



Women were included in the legal profession after the enactment of \_\_\_\_\_.

1. Advocates Act, 1961
2. Legal Practitioners (Women) Act, 1923
3. Government of India Act, 1923
4. Legal Practitioners Act, 1846

**Options :**

485584135449. 1  
485584135450. 2  
485584135451. 3  
485584135452. 4

**Question Number : 228 Question Id : 48558433863 Question Type : MCQ Option Shuffling : No Is Question Mandatory : No Calculator : None Response Time : N.A Think Time : N.A Minimum Instruction Time : 0**

**Correct Marks : 5 Wrong Marks : 1**

**Question Key Details :**

Key	Value
Comprehension	MCQ

\_\_\_\_\_ ਕਾਨੂੰਨ ਤੋਂ ਬਾਅਦ ਔਰਤਾਂ ਕਾਨੂੰਨੀ ਕੀਤੇ ਵਿੱਚ ਸ਼ਾਮਲ ਹੋਣ ਲੱਗੀਆਂ?

1. ਐਡਵੋਕੇਟਸ ਐਕਟ, 1961
2. ਕਾਨੂੰਨੀ ਪ੍ਰੈਕਟੀਸ਼ਨਰਜ਼ (ਔਰਤਾਂ) ਕਾਨੂੰਨ, 1923
3. ਭਾਰਤ ਸਰਕਾਰ ਕਾਨੂੰਨ, 1923
4. ਕਾਨੂੰਨੀ ਪ੍ਰੈਕਟੀਸ਼ਨਰਜ਼, 1846

**Options :**

485584135449. 1  
485584135450. 2  
485584135451. 3  
485584135452. 4

**Question Number : 229 Question Id : 48558433864 Question Type : MCQ Option Shuffling : No Is Question Mandatory : No Calculator : None Response Time : N.A Think Time : N.A Minimum Instruction Time : 0**

**Correct Marks : 5 Wrong Marks : 1**

**Question Key Details :**

Key	Value
Comprehension	MCQ

Arrange the below mentioned incidents in the correct sequence leading to liberalization of the legal profession:

- A. Madras HC's decision permitting lawyers to practice in India on a 'Fly in and fly out' basis
- B. Amendment in Advocate Act for preparing a level playing field for Indian Lawyers
- C. Signing of WTO Treaty by Government of India
- D. Judgment of Bombay HC that foreign law firms could not be permitted to set up liaison office in India
- E. Resolution passed by Bar Council of India opposing the opening up of legal profession to foreign lawyers

Choose the correct answer from the options given below:

- 1. C - B - E - D - A
- 2. A - C - D - E - B
- 3. D - B - E - C - A
- 4. A - C - B - E - D

**Options :**

- 485584135453. 1
- 485584135454. 2
- 485584135455. 3
- 485584135456. 4

**Question Number : 229 Question Id : 48558433864 Question Type : MCQ Option Shuffling : No Is Question Mandatory : No Calculator : None Response Time : N.A Think Time : N.A Minimum Instruction Time : 0**

**Correct Marks : 5 Wrong Marks : 1**

**Question Key Details :**

Key	Value
Comprehension	MCQ

ਨਿਮਨਲਿਖਤ ਘਟਨਾਵਾਂ ਕਾਨੂੰਨੀ ਕਿੱਤੇ ਦਾ ਉਦਾਰੀਕਰਣ ਦੇ ਸੰਬੰਧ ਵਿੱਚ ਸਹੀ ਕ੍ਰਮ ਵਿੱਚ ਕਰੋ:-

- A. ਮਦਰਾਸ ਹਾਈਕੋਰਟ ਦਾ ਫੈਸਲਾ ਵਕੀਲਾਂ ਨੂੰ ਭਾਰਤ ਵਿੱਚ ਪ੍ਰੈਕਟਿਸ ਕਰਨ ਲਈ " ਫਲਾਈ ਇਨ ਅਤੇ ਫਲਾਈ ਆਉਟ " ਦੀ ਆਗਿਆ ਦਿੰਦਾ ਹੈ।
- B. ਭਾਰਤੀ ਵਕੀਲਾਂ ਲਈ ਇੱਕ ਪੱਧਰੀ ਖੇਡ ਦਾ ਮੈਦਾਨ ਤਿਆਰ ਕਰਨ ਲਈ ਐਡਵੋਕੇਟ ਐਕਟ ਵਿੱਚ ਸੋਧ।
- C. ਭਾਰਤ ਸਰਕਾਰ ਦੁਆਰਾ ਡਬਲਿਊ. ਟੀ. ਓ. ਦੀ ਸੰਧੀ ਤੇ ਹਸਤਾਖਰ
- D. ਬੰਬੇ ਹਾਈਕੋਰਟ ਦਾ ਫੈਸਲਾ ਹੈ ਕਿ ਵਿਦੇਸ਼ੀ ਕਾਨੂੰਨੀ ਫਰਮ ਭਾਰਤ ਵਿੱਚ ਦਫ਼ਤਰ ਨਹੀਂ ਖੋਲ੍ਹ ਸਕਦੀ।
- E. ਵਿਦੇਸ਼ੀ ਵਕੀਲਾਂ ਲਈ ਕਾਨੂੰਨੀ ਕਿੱਤੇ ਲਈ ਦਫ਼ਤਰ ਖੋਲਣ ਦੀ ਭਾਰਤੀ ਬਾਰ ਕੌਂਸਲ ਨੇ ਵਿਰੋਧ ਵਿੱਚ ਮਤਾ ਪਾਸ ਕੀਤਾ ਹੈ।

ਹੇਠਾਂ ਦਿੱਤੇ ਵਿਕਲਪਾਂ ਵਿੱਚੋਂ ਸਹੀ ਉੱਤਰ ਦੀ ਚੋਣ ਕਰੋ:

- 1. C - B - E - D - A
- 2. A - C - D - E - B
- 3. D - B - E - C - A
- 4. A - C - B - E - D

**Options :**

- 485584135453. 1
- 485584135454. 2

485584135455. 3

485584135456. 4

**Question Number : 230 Question Id : 48558433865 Question Type : MCQ Option Shuffling : No Is Question Mandatory : No Calculator : None Response Time : N.A Think Time : N.A Minimum Instruction Time : 0**

**Correct Marks : 5 Wrong Marks : 1**

**Question Key Details :**

Key	Value
Comprehension	MCQ

Match List I with List II

LIST I		LIST II	
Countries		Regulation/Restriction on Advertisement	
A.	USA	I.	Bar Council of India Rules
B.	Malayasia	II.	Model Rules of Professional Conduct
C.	India	III.	Legal Profession (Publicity Rules) 2001
D.	Hongkong	IV.	Forbidden to advertise on television, radio and in cinemas

Choose the correct answer from the options given below:

1. A-I, B-II, C-IV, D-III

2. A-II, B-III, C-I, D-IV

3. A-III, B-IV, C-II, D-I

4. A-IV, B-I, C-III, D-II

**Options :**

485584135457. 1

485584135458. 2

485584135459. 3

485584135460. 4

**Question Number : 230 Question Id : 48558433865 Question Type : MCQ Option Shuffling : No Is Question Mandatory : No Calculator : None Response Time : N.A Think Time : N.A Minimum Instruction Time : 0**

**Correct Marks : 5 Wrong Marks : 1**

**Question Key Details :**

Key	Value
Comprehension	MCQ

ਸੂਚੀ I ਦਾ ਸੂਚੀ II ਨਾਲ ਮਿਲਾਣ ਕਰੋ

ਸੂਚੀ I Countries	ਸੂਚੀ II Regulation/Restriction on Advertisement
A. ਜੂ. ਐਸ. ਏ.	I. ਬਾਰ ਕੌਂਸਲ ਆਫ਼ ਇੰਡੀਆ ਦੇ ਨਿਯਮ
B. ਮਲੇਸ਼ੀਆ	II. ਕਿੱਤਾਮੁੱਖੀ ਵਿਵਹਾਰ ਦੇ ਮਾਡਲ ਨਿਯਮ
C. ਭਾਰਤ	III. ਕਾਨੂੰਨੀ ਕਿੱਤਾ ( ਪਬਲੀਸਿਟੀ ਨਿਯਮ ) 2001
D. ਹਾਂਗਕਾਂਗ	IV. ਟੈਲੀਵਿਜ਼ਨ, ਰੇਡੀਓ ਅਤੇ ਸਿਨੇਮਿਆਂ ਵਿੱਚ ਇਸ਼ਤਿਹਾਰ ਕਰਨ ਦੀ ਮਨਾਹੀ।

ਹੇਠਾਂ ਦਿੱਤੇ ਵਿਕਲਪਾਂ ਵਿੱਚੋਂ ਸਹੀ ਉੱਤਰ ਦੀ ਚੋਣ ਕਰੋ:

1. A-I, B-II, C-IV, D-III
2. A-II, B-III, C-I, D-IV
3. A-III, B-IV, C-II, D-I
4. A-IV, B-I, C-III, D-II

**Options :**

485584135457. 1  
485584135458. 2  
485584135459. 3  
485584135460. 4

**Question Number : 231 Question Id : 48558433866 Question Type : MCQ Option Shuffling : No Is Question Mandatory : No Calculator : None Response Time : N.A Think Time : N.A Minimum Instruction Time : 0**

**Correct Marks : 5 Wrong Marks : 1**

**Question Key Details :**

Key	Value
Comprehension	MCQ

Who among the following are allowed to practice law in India after the Advocates Act 1961?

- A. Barristers
- B. Advocates
- C. Advocate on Record
- D. Attorney General of India
- E. Pleaders

Choose the correct answer from the options given below:

1. A, B only
2. B, C only
3. C, D only
4. D, E only

**Options :**

485584135461. 1  
485584135462. 2  
485584135463. 3

485584135464. 4

**Question Number : 231 Question Id : 48558433866 Question Type : MCQ Option Shuffling : No Is Question Mandatory : No Calculator : None Response Time : N.A Think Time : N.A Minimum Instruction Time : 0**

**Correct Marks : 5 Wrong Marks : 1**

**Question Key Details :**

Key	Value
Comprehension	MCQ

ਐਡਵੋਕੇਟਸ ਐਕਟ 1961 ਤੋਂ ਬਾਅਦ ਨਿਮਨਲਿਖਤ ਵਿੱਚ ਕਿਸ ਨੂੰ ਕਾਨੂੰਨ ਦੀ ਪ੍ਰੈਕਟਿਸ ਕਰਨ ਦੀ ਆਗਿਆ ਹੈ?

- A. ਬੈਰਿਸਟਰਜ਼
- B. ਐਡਵੋਕੇਟਸ
- C. ਐਡਵੋਕੇਟਸ ਤੇ ਰਿਕਾਰਡ
- D. ਭਾਰਤ ਦਾ ਅਟਾਰਨੀ ਜਨਰਲ
- E. ਯਾਚਿਕ

ਹੇਠਾਂ ਦਿੱਤੇ ਵਿਕਲਪਾਂ ਵਿੱਚੋਂ ਸਹੀ ਉੱਤਰ ਦੀ ਚੋਣ ਕਰੋ:

- 1. ਸਿਰਫ਼ A, B
- 2. ਸਿਰਫ਼ B, C
- 3. ਸਿਰਫ਼ C, D
- 4. ਸਿਰਫ਼ D, E

**Options :**

485584135461. 1

485584135462. 2

485584135463. 3

485584135464. 4

**Question Number : 232 Question Id : 48558433867 Question Type : MCQ Option Shuffling : No Is Question Mandatory : No Calculator : None Response Time : N.A Think Time : N.A Minimum Instruction Time : 0**

**Correct Marks : 5 Wrong Marks : 1**

**Question Key Details :**

Key	Value
Comprehension	MCQ

Match List I with List II

LIST I		LIST II	
A.	14th Law Commission Report	I.	India became obliged to introduce free legal aid in domestic legislation
B.	Committee on Judicature	II.	Lok Adalat to be setup to promote free legal Aid
C.	Legal Services Authorities Act, 1987	III.	Promoted the idea of free Legal Aid
D.	Signing of ICCPR in 1976	IV.	Framework to provide free Legal aid prepared

Choose the correct answer from the options given below:

1. A-IV, B-I, C-III, D-II
2. A-I, B-II, C-IV, D-III
3. A-II, B-III, C-I, D-IV
4. A-III, B-IV, C-II, D-I

**Options :**

485584135465. 1  
485584135466. 2  
485584135467. 3  
485584135468. 4

**Question Number : 232 Question Id : 48558433867 Question Type : MCQ Option Shuffling : No Is Question Mandatory : No Calculator : None Response Time : N.A Think Time : N.A Minimum Instruction Time : 0**

**Correct Marks : 5 Wrong Marks : 1**

**Question Key Details :**

Key	Value
Comprehension	MCQ

ਸੂਚੀ I ਦਾ ਸੂਚੀ II ਨਾਲ ਮਿਲਾਣ ਕਰੋ

ਸੂਚੀ I		ਸੂਚੀ II	
A.	14ਵੀਂ ਲਾਅ ਕਮਿਸ਼ਨ ਰਿਪੋਰਟ	I.	ਭਾਰਤ ਨੇ ਸ਼ਹਿਰੀ ਵਿਧਾਨਕ ਵਿੱਚ ਫਰੀ ਕਾਨੂੰਨੀ ਸਹਾਇਤਾ ਸਥਾਪਤ ਕੀਤੀ।
B.	ਨਿਆਂ ਤੇ ਕਮਿਸ਼ਨ	II.	ਫਰੀ ਕਾਨੂੰਨੀ ਸਹਾਇਤਾ ਨੂੰ ਉਤਸ਼ਾਹਤ ਕਰਨ ਲਈ ਲੋਕ ਅਦਾਲਤ ਸਥਾਪਤ ਕਰਨਾ।
C.	ਕਾਨੂੰਨੀ ਸੇਵਾਵਾਂ ਅਥਾਰਟੀ ਐਕਟ 1987	III.	ਫਰੀ ਕਾਨੂੰਨੀ ਸਹਾਇਤਾ ਦੇ ਵਿਚਾਰ ਨੂੰ ਉਤਸ਼ਾਹਤ ਕਰਨਾ।
D.	ਸਾਈਨਿੰਗ ਆਫ਼ ICCPR, 1976	IV.	ਫਰੀ ਕਾਨੂੰਨੀ ਸਹਾਇਤਾ ਦੇਣ ਲਈ ਫਰੇਮਵਰਕ ਤਿਆਰ ਕੀਤਾ।

ਹੇਠਾਂ ਦਿੱਤੇ ਵਿਕਲਪਾਂ ਵਿੱਚੋਂ ਸਹੀ ਉੱਤਰ ਦੀ ਚੋਣ ਕਰੋ:

1. A-IV, B-I, C-III, D-II
2. A-I, B-II, C-IV, D-III
3. A-II, B-III, C-I, D-IV
4. A-III, B-IV, C-II, D-I

**Options :**

485584135465. 1  
485584135466. 2  
485584135467. 3  
485584135468. 4

**Question Number : 233 Question Id : 48558433868 Question Type : MCQ Option Shuffling : No Is Question Mandatory : No Calculator : None Response Time : N.A Think Time : N.A Minimum Instruction Time : 0**

**Correct Marks : 5 Wrong Marks : 1**

**Question Key Details :**

Key	Value
Comprehension	MCQ

Which international organisation was initially originated as International Bank for Reconstruction and Development (IBRD)?

1. International Monetary Fund
2. World Bank
3. Reserve Bank
4. Monetary Bank of world

**Options :**

485584135469. 1  
485584135470. 2  
485584135471. 3  
485584135472. 4

Question Number : 233 Question Id : 48558433868 Question Type : MCQ Option Shuffling : No Is Question Mandatory : No Calculator : None Response Time : N.A Think Time : N.A Minimum Instruction Time : 0

Correct Marks : 5 Wrong Marks : 1

Question Key Details :

Key	Value
Comprehension	MCQ

ਕਿਹੜੇ ਅੰਤਰ ਰਾਸ਼ਟਰੀ ਸੰਗਠਨ ਨੂੰ ਦੁਬਾਰਾ ਨਿਰਮਤ ਅਤੇ ਵਿਕਾਸ ਲਈ ਅੰਤਰ-ਰਾਸ਼ਟਰੀ ਬੈਂਕ ਵਜੋਂ ਪੈਦਾ ਕੀਤਾ ਗਿਆ?

1. ਅੰਤਰ-ਰਾਸ਼ਟਰੀ ਮੁਦਿਕ ਫੰਡ
2. ਸੰਸਾਰ ਬੈਂਕ
3. ਰਿਜ਼ਰਵ ਬੈਂਕ
4. ਮੁਦਿਕ ਬੈਂਕ ਆਫ ਵਰਲਡ

Options :

485584135469. 1  
485584135470. 2  
485584135471. 3  
485584135472. 4

Question Number : 234 Question Id : 48558433869 Question Type : MCQ Option Shuffling : No Is Question Mandatory : No Calculator : None Response Time : N.A Think Time : N.A Minimum Instruction Time : 0

Correct Marks : 5 Wrong Marks : 1

Question Key Details :

Key	Value
Comprehension	MCQ

Arrange the following in order of establishment

- A. ILO
- B. UNESCO
- C. IMF
- D. WHO

Choose the correct answer from the options given below:

1. A - C - B - D
2. D - A - B - C
3. C - A - B - D
4. A - B - C - D

Options :

485584135473. 1  
485584135474. 2  
485584135475. 3  
485584135476. 4

Question Number : 234 Question Id : 48558433869 Question Type : MCQ Option Shuffling : No Is Question Mandatory : No Calculator : None Response Time : N.A Think Time : N.A Minimum Instruction Time : 0



Correct Marks : 5 Wrong Marks : 1

Question Key Details :

Key	Value
Comprehension	MCQ

ਨਿਮਨਲਿਖਤ ਨੂੰ ਸਥਾਪਤੀ ਦੇ ਕ੍ਰਮ ਵਿੱਚ ਤਰਤੀਬ ਬੱਧ ਕਰੋ:-

- A. ILO
- B. UNESCO
- C. IMF
- D. WHO

ਹੇਠਾਂ ਦਿੱਤੇ ਵਿਕਲਪਾਂ ਵਿੱਚੋਂ ਸਹੀ ਉੱਤਰ ਦੀ ਚੋਣ ਕਰੋ:

- 1. A - C - B - D
- 2. D - A - B - C
- 3. C - A - B - D
- 4. A - B - C - D

Options :

- 485584135473. 1
- 485584135474. 2
- 485584135475. 3
- 485584135476. 4

Question Number : 235 Question Id : 48558433870 Question Type : MCQ Option Shuffling : No Is Question Mandatory : No Calculator : None Response Time : N.A Think Time : N.A Minimum Instruction Time : 0

Correct Marks : 5 Wrong Marks : 1

Question Key Details :

Key	Value
Comprehension	MCQ

Which of the following is not a method by which a state may express its consent to be bound by a particular treaty:-

- 1. Consent by signature
- 2. Consent by exchange of instruments
- 3. Consent by verbal assurance of Head of State
- 4. Consent by ratification

Options :

- 485584135477. 1
- 485584135478. 2
- 485584135479. 3
- 485584135480. 4

Question Number : 235 Question Id : 48558433870 Question Type : MCQ Option Shuffling : No Is Question Mandatory : No Calculator : None Response Time : N.A Think Time : N.A Minimum Instruction Time : 0

Correct Marks : 5 Wrong Marks : 1

**Question Key Details :**

Key	Value
Comprehension	MCQ

ਨਿਮਨਲਿਖਤ ਵਿੱਚੋਂ ਕਿਹੜਾ ਢੰਗ ਨਹੀਂ ਹੈ, ਜਿਸ ਨੂੰ ਕੋਈ ਰਾਜ ਕਿਸੇ ਵਿਸ਼ੇਸ਼ ਸੰਧੀ ਦੁਆਰਾ ਬੰਨੇ ਜਾਣ ਲਈ ਆਪਣੀ ਸਹਿਮਤੀ ਪ੍ਰਗਟ ਕਰ ਸਕਦਾ ਹੈ:-

1. ਹਸਤਾਖਰ ਦੁਆਰਾ ਸਹਿਮਤੀ।
2. ਸਾਧਨਾਂ ਦੀ ਅਦਲਾ-ਬਦਲੀ ਦੁਆਰਾ ਸਹਿਮਤੀ।
3. ਰਾਜ ਦੇ ਮੱਖੀ ਦੁਆਰਾ ਮੌਖਿਕ ਤੌਰ ਤੇ ਯਕੀਨੀ ਬਣਾ ਕੇ ਸਹਿਮਤੀ ਦੇਣਾ।
4. ਪ੍ਰਵਾਨਗੀ ਦੁਆਰਾ ਸਹਿਮਤੀ।

**Options :**

485584135477. 1  
485584135478. 2  
485584135479. 3  
485584135480. 4

**Question Number : 236 Question Id : 48558433871 Question Type : MCQ Option Shuffling : No Is Question Mandatory : No Calculator : None Response Time : N.A Think Time : N.A Minimum Instruction Time : 0**

**Correct Marks : 5 Wrong Marks : 1**

**Question Key Details :**

Key	Value
Comprehension	MCQ

Which of the following is a subsidiary source of International law according to Article 38(1) of ICJ statute?

1. International Conventions
2. International Customs
3. General Principles of International law
4. Teachings of most highly qualified Publicists

**Options :**

485584135481. 1  
485584135482. 2  
485584135483. 3  
485584135484. 4

**Question Number : 236 Question Id : 48558433871 Question Type : MCQ Option Shuffling : No Is Question Mandatory : No Calculator : None Response Time : N.A Think Time : N.A Minimum Instruction Time : 0**

**Correct Marks : 5 Wrong Marks : 1**

**Question Key Details :**

Key	Value
Comprehension	MCQ

ਨਿਮਨਲਿਖਤ ਵਿੱਚੋਂ ਕਿਹੜਾ ਅੰਤਰ-ਰਾਸ਼ਟਰੀ ਕੋਰਟ ਆਫ਼ ਜਸਟਿਸ ਦੇ ਆਰਟੀਕਲ 38(1) ਅਨੁਸਾਰ ਅੰਤਰ-ਰਾਸ਼ਟਰੀ ਕਾਨੂੰਨ ਦਾ ਰਿਆਇਤੀ ਸੋਮਾ ਹੈ?

1. ਅੰਤਰ-ਰਾਸ਼ਟਰੀ ਕਨਵੈਨਸ਼ਨਜ਼
2. ਅੰਤਰ-ਰਾਸ਼ਟਰੀ ਕਸਟਮਜ਼
3. ਅੰਤਰ-ਰਾਸ਼ਟਰੀ ਕਾਨੂੰਨ ਦੇ ਆਮ ਸਿਧਾਂਤ
4. ਉਚ ਵਿਦਿਆ ਪ੍ਰਾਪਤ ਪ੍ਰਚਾਰਕ ਦੀਆਂ ਸਿੱਖਿਆਵਾਂ।

**Options :**

485584135481. 1  
485584135482. 2  
485584135483. 3  
485584135484. 4

**Question Number : 237 Question Id : 48558433872 Question Type : MCQ Option Shuffling : No Is Question Mandatory : No Calculator : None Response Time : N.A Think Time : N.A Minimum Instruction Time : 0**

**Correct Marks : 5 Wrong Marks : 1**

**Question Key Details :**

Key	Value
Comprehension	MCQ

Choose the correct chronological order of the following

- A. The Hague conference focuses on wide array of aspects of private law.
- B. India adopted the UNCITRAL.
- C. ILO was set up after the war, as a part of Treaty of Versailles
- D. Human Rights Council is working for human rights issues.

Choose the correct answer from the options given below:

1. B, C, A, D
2. A, C, B, D
3. D, A, B, C
4. B, D, A, C

**Options :**

485584135485. 1  
485584135486. 2  
485584135487. 3  
485584135488. 4

**Question Number : 237 Question Id : 48558433872 Question Type : MCQ Option Shuffling : No Is Question Mandatory : No Calculator : None Response Time : N.A Think Time : N.A Minimum Instruction Time : 0**

**Correct Marks : 5 Wrong Marks : 1**

**Question Key Details :**

Key	Value
Comprehension	MCQ

ਨਿਮਨਲਿਖਤ ਵਿੱਚੋਂ ਸਹੀ ਕਾਲਕ੍ਰਮਿਕ ਕ੍ਰਮ ਵਿੱਚ ਕਰੋ:-

- A. ਹੇਗ ਕਾਨਫਰੰਸ ਵਿੱਚ ਨਿੱਜੀ ਕਾਨੂੰਨ ਦੇ ਚੌੜੇ ਪੱਖਾਂ ਤੇ ਧਿਆਨ ਕੇਂਦਰਤ ਕੀਤਾ।
- B. ਭਾਰਤ ਨੇ ਅਨਸਾਈਟਰਲ ਪ੍ਰਵਾਨ ਕੀਤਾ।
- C. ਲੜਾਈ ਤੋਂ ਬਾਅਦ ਵਰਮੇਲਜ਼ ਦੀ ਸੰਧੀ ਦੇ ਹਿੱਸੇ ਵਜੋਂ ਆਈ. ਐਲ. ਓ. ਬਣਾਇਆ ਗਿਆ।
- D. ਮਨੁੱਖੀ ਅਧਿਕਾਰ ਕੌਂਸਲ ਮਨੁੱਖੀ ਅਧਿਕਾਰਾਂ ਦੇ ਮੁੱਦਿਆਂ ਲਈ ਕੰਮ ਕਰਦੀ ਹੈ।

ਹੇਠਾਂ ਦਿੱਤੇ ਵਿਕਲਪਾਂ ਵਿੱਚੋਂ ਸਹੀ ਉੱਤਰ ਦੀ ਚੋਣ ਕਰੋ:

- 1. B, C, A, D
- 2. A, C, B, D
- 3. D, A, B, C
- 4. B, D, A, C

**Options :**

- 485584135485. 1
- 485584135486. 2
- 485584135487. 3
- 485584135488. 4

**Question Number : 238 Question Id : 48558433873 Question Type : MCQ Option Shuffling : No Is Question Mandatory : No Calculator : None Response Time : N.A Think Time : N.A Minimum Instruction Time : 0**

**Correct Marks : 5 Wrong Marks : 1**

**Question Key Details :**

Key	Value
Comprehension	MCQ

Article 59 of the statute of the ICJ states that except on parties to the dispute the decision of ICJ is

- 1. Not binding
- 2. binding on all states
- 3. based on consent of states
- 4. binding on Security Council

**Options :**

- 485584135489. 1
- 485584135490. 2
- 485584135491. 3
- 485584135492. 4

**Question Number : 238 Question Id : 48558433873 Question Type : MCQ Option Shuffling : No Is Question Mandatory : No Calculator : None Response Time : N.A Think Time : N.A Minimum Instruction Time : 0**

**Correct Marks : 5 Wrong Marks : 1**

**Question Key Details :**

Key	Value
Comprehension	MCQ

ਅੰਤਰ-ਰਾਸ਼ਟਰੀ ਕੋਰਟ ਆਫ ਜਸਟਿਸ ਦੇ ਬੁੱਤ ਦਾ ਆਰਟੀਕਲ 59 ਕਹਿੰਦਾ ਹੈ ਕਿ ਵਿਵਾਦਤ ਧਿਰਾਂ ਨੂੰ ਛੱਡ ਕੇ ਆਈ. ਸੀ. ਜੇ. ਦਾ ਫੈਸਲਾ ਹੈ :-

1. ਬੰਧਨ ਨਹੀਂ
2. ਸਾਰੇ ਰਾਜਾਂ ਤੇ ਬਾਧਿਤ
3. ਰਾਜਾਂ ਦਿਨ੍ਹਿਮਤੀ ਦੇ ਅਧਾਰ ਤੇ
4. ਸੁਰੱਖਿਆ ਕੌਸਲ ਤੇ ਬਾਧਿਤ

**Options :**

485584135489. 1  
 485584135490. 2  
 485584135491. 3  
 485584135492. 4

**Question Number : 239 Question Id : 48558433874 Question Type : MCQ Option Shuffling : No Is Question Mandatory : No Calculator : None Response Time : N.A Think Time : N.A Minimum Instruction Time : 0**

**Correct Marks : 5 Wrong Marks : 1**

**Question Key Details :**

Key	Value
Comprehension	MCQ

Match List I with List II

LIST I		LIST II	
A.	<i>Injuria Sine Damnum</i>	I.	Where there is right there is remedy
B.	<i>Bona fide</i>	II.	Let the buyer beware
C.	<i>Caveat Emptor</i>	III.	Injury without damage
D.	<i>Ubi Jus Ibi Remedium</i>	IV.	Good faith

Choose the correct answer from the options given below:

1. A-III, B-IV, C-II, D-I
2. A-I, B-II, C-III, D-IV
3. A-IV, B-III, C-I, D-II
4. A-I, B-IV, C-II, D-III

**Options :**

485584135493. 1  
 485584135494. 2  
 485584135495. 3  
 485584135496. 4

**Question Number : 239 Question Id : 48558433874 Question Type : MCQ Option Shuffling : No Is Question Mandatory : No Calculator : None Response Time : N.A Think Time : N.A Minimum Instruction Time : 0**

**Correct Marks : 5 Wrong Marks : 1**

**Question Key Details :**

Key	Value
Comprehension	MCQ

ਸੂਚੀ I ਦਾ ਸੂਚੀ II ਨਾਲ ਮਿਲਾਣ ਕਰੋ

ਸੂਚੀ I		ਸੂਚੀ II	
A.	ਇੰਜਰੀਆਂ ਸਾਇਨ ਡੈਮਨਮ	I.	ਜਿੱਥੇ ਅਧਿਕਾਰ ਹੈ, ਉੱਥੇ ਮੁਆਵਜ਼ਤ ਹੈ
B.	ਬੇਨਾਫ਼ਾਈਡ	II.	ਖਰੀਦਦਾਰ ਨੂੰ ਜਾਗਰੂਕ ਕਰੋ
C.	ਕੇਵਟ ਐਪਟੋਰ	III.	ਬਿਨ੍ਹਾਂ ਨੁਕਸਾਨ ਤੋਂ ਸੱਟ
D.	ਉਬੀ ਜੁਸ ਈਬੀ ਰੀਮੀਡੀਅਮ	IV.	ਚੰਗਾ ਵਿਸ਼ਵਾਸ

ਹੇਠਾਂ ਦਿੱਤੇ ਵਿਕਲਪਾਂ ਵਿੱਚੋਂ ਸਹੀ ਉੱਤਰ ਦੀ ਚੋਣ ਕਰੋ:

1. A-III, B-IV, C-II, D-I
2. A-I, B-II, C-III, D-IV
3. A-IV, B-III, C-I, D-II
4. A-I, B-IV, C-II, D-III

**Options :**

485584135493. 1  
485584135494. 2  
485584135495. 3  
485584135496. 4

**Question Number : 240 Question Id : 48558433875 Question Type : MCQ Option Shuffling : No Is Question Mandatory : No Calculator : None Response Time : N.A Think Time : N.A Minimum Instruction Time : 0**

**Correct Marks : 5 Wrong Marks : 1**

**Question Key Details :**

Key	Value
Comprehension	MCQ

What is the meaning of the legal Maxim '*Ignorantia Facti Excusat- Ignorantia Juris Non Excusat*'

1. Ignorance of law is an excuse
2. Ignorance of law of fact is not an excuse
3. Ignorance of fact is an excuse but ignorance of law is not an excuse
4. Ignorance of fact is not an excuse

**Options :**

485584135497. 1  
485584135498. 2  
485584135499. 3  
485584135500. 4

**Question Number : 240 Question Id : 48558433875 Question Type : MCQ Option Shuffling : No Is Question Mandatory : No Calculator : None Response Time : N.A Think Time : N.A Minimum Instruction Time : 0**

**Correct Marks : 5 Wrong Marks : 1**

**Question Key Details :**

Key	Value
Comprehension	MCQ

ਕਾਨੂੰਨੀ ਸਿਧਾਂਤ " ਇਗਨੋਰੈਂਟੀਆਂ ਫੈਕਟੀ ਅਗਜ਼ਾਸਟ - ਇਗਨੋਰੈਂਟੀਆਂ ਜੁਰੀਸ ਨਾਨ - ਅਗਜ਼ਾਸਟ " ਦਾ ਅਰਥ ਕਿ ਹੈ?

1. ਕਾਨੂੰਨ ਦੀ ਅਗਿਆਨਤਾ ਇੱਕ ਬਹਾਨਾ ਹੈ।
2. ਕਾਨੂੰਨ ਦੇ ਤੱਥ ਦੀ ਅਗਿਆਨਤਾ ਇੱਕ ਬਹਾਨਾ ਨਹੀਂ ਹੈ।
3. ਤੱਥ ਦੀ ਅਗਿਆਨਤਾ ਇੱਕ ਬਹਾਨਾ ਹੈ ਪਰ ਕਾਨੂੰਨ ਦੀ ਅਗਿਆਨਤਾ ਇੱਕ ਬਹਾਨਾ ਨਹੀਂ ਹੈ।
4. ਤੱਥ ਦੀ ਅਗਿਆਨਤਾ ਇੱਕ ਬਹਾਨਾ ਨਹੀਂ ਹੈ।

**Options :**

- 485584135497. 1
- 485584135498. 2
- 485584135499. 3
- 485584135500. 4

**Sub-Section Number :** 2  
**Sub-Section Id :** 4855842432  
**Question Shuffling Allowed :** No  
**Is Section Default? :** null

**Question Number : 241 Question Id : 48558433876 Question Type : MCQ Option Shuffling : No Is Question Mandatory : No Calculator : None Response Time : N.A Think Time : N.A Minimum Instruction Time : 0**

**Correct Marks : 5 Wrong Marks : 1**

**Question Key Details :**

Key	Value
Comprehension	Comp1

Read the passage and answer the following questions:-

"In 2010, the National Legal Services Authority of India (NALSA) adopted the National Legal Service Authority (Free and Competent Legal Services) Regulations in exercise of its power under Section 29 of Legal Service Authorities Act, 1987. The regulations are applicable to Legal Service Committees of the Supreme Court, High Courts, the States, districts and taluks. The legal service institution is vested with authority to invite applications from legal practitioners with requisite experience to indicate the type of cases they are entrusted with."

To be part of panel of lawyers to provide legal aid, the practioner should have

1. 3 or more years experience at bar
2. less than 3 years experience at bar
3. 5 years experience at bar
4. 10 years experience at bar

**Options :**

- 485584135501. 1
- 485584135502. 2
- 485584135503. 3
- 485584135504. 4

Question Number : 241 Question Id : 48558433876 Question Type : MCQ Option Shuffling : No Is Question Mandatory : No Calculator : None Response Time : N.A Think Time : N.A Minimum Instruction Time : 0

Correct Marks : 5 Wrong Marks : 1

Question Key Details :

Key	Value
Comprehension	Comp1

ਹੇਠਾਂ ਦਿੱਤੇ ਪੈਰੇ ਨੂੰ ਧਿਆਨ ਨਾਲ ਪੜ੍ਹੋ ਅਤੇ ਪ੍ਰਸ਼ਨ 41 ਤੋਂ 45 ਤੱਕ ਉੱਤਰ ਦਿਓ

2010 ਵਿੱਚ, ਭਾਰਤ ਦੀ ਰਾਸ਼ਟਰੀ ਕਾਨੂੰਨੀ ਸੇਵਾਵਾਂ ਅਥਾਰਟੀ ਨੇ ਕਾਨੂੰਨੀ ਸੇਵਾਵਾਂ ਅਥਾਰਟੀ ਐਕਟ 1987 ਦੀ ਧਾਰਾ 29 ਅਧੀਨ ਆਪਣੀ ਸ਼ਕਤੀ ਦੀ ਵਰਤੋਂ ਕਰਦੇ ਹੋਏ ਰਾਸ਼ਟਰੀ ਕਾਨੂੰਨੀ ਸੇਵਾਵਾਂ ਅਥਾਰਟੀ ( ਮੁਫਤ ਅਤੇ ਸਮਰੱਥ ਕਾਨੂੰਨੀ ਸੇਵਾਵਾਂ ) ਨਿਯਮਾਂ ਨੂੰ ਅਪਣਾਇਆ ਹੈ। ਨਿਯਮ ਉਚੱਤਮ ਅਦਾਲਤ, ਉਚ ਅਦਾਲਤ, ਰਾਜ, ਜਿਲ੍ਹਿਆਂ ਅਤੇ ਤਾਲੁਕਾਂ ਦੀ ਕਾਨੂੰਨੀ ਸੇਵਾਵਾਂ ਕਮੇਟੀਆਂ ਤੇ ਲਾਗੂ ਹੁੰਦੇ ਹਨ। ਕਾਨੂੰਨੀ ਸੇਵਾ ਸੰਸਥਾ ਕੋਲ ਲੋੜੀਂਦੇ ਤਜਰਬੇ ਵਾਲੇ ਕਾਨੂੰਨੀ ਪ੍ਰੈਕਟੀਸ਼ਨਰਾਂ ਤੋਂ ਅਰਜ਼ੀਆਂ ਮੰਗਣ ਦਾ ਅਧਿਕਾਰ ਹੈ ਤਾਂ ਜੋ ਉਹ ਕੇਸਾਂ ਦੀ ਕਿਸਮ ਨੂੰ ਦਰਸਾਉਣ ਜੋ ਉਹਨਾਂ ਨੂੰ ਸੌਂਪੇ ਗਏ ਹਨ।

ਕਾਨੂੰਨੀ ਸਹਾਇਤਾ ਪ੍ਰਦਾਨ ਕਰਨ ਲਈ ਵਕੀਲਾਂ ਦੇ ਪੈਨਲ ਦਾ ਹਿੱਸਾ ਬਣਨ ਲਈ, ਪ੍ਰੈਕਟੀਸ਼ਨਰ ਕੋਲ ਹੇਠਾਂ ਚਾਹੀਦਾ ਹੈ:-

1. ਬਾਰ ਤੇ 3 ਜਾਂ ਜ਼ਿਆਦਾ ਸਾਲਾਂ ਦਾ ਅਨੁਭਵ
2. ਬਾਰ ਤੇ 3 ਸਾਲਾਂ ਤੋਂ ਘੱਟ ਅਨੁਭਵ
3. ਬਾਰ ਤੇ 5 ਤੇ ਸਾਲਾਂ ਅਨੁਭਵ
4. ਬਾਰ ਤੇ 10 ਤੇ ਸਾਲਾਂ ਅਨੁਭਵ

Options :

485584135501. 1
485584135502. 2
485584135503. 3
485584135504. 4

Question Number : 242 Question Id : 48558433877 Question Type : MCQ Option Shuffling : No Is Question Mandatory : No Calculator : None Response Time : N.A Think Time : N.A Minimum Instruction Time : 0

Correct Marks : 5 Wrong Marks : 1

Question Key Details :

Key	Value
Comprehension	Comp1

Read the passage and answer the following questions:-

"In 2010, the National Legal Services Authority of India (NALSA) adopted the National Legal Service Authority (Free and Competent Legal Services) Regulations in exercise of its power under Section 29 of Legal Service Authorities Act, 1987. The regulations are applicable to Legal Service Committees of the Supreme Court, High Courts, the States, districts and taluks. The legal service institution is vested with authority to invite applications from legal practitioners with requisite experience to indicate the type of cases they are entrusted with."



Panel of legal aid lawyers is reconstituted

1. every year
2. every three years
3. every 5 years
4. every 2 years

**Options :**

485584135505. 1  
485584135506. 2  
485584135507. 3  
485584135508. 4

**Question Number : 242 Question Id : 48558433877 Question Type : MCQ Option Shuffling : No Is Question Mandatory : No Calculator : None Response Time : N.A Think Time : N.A Minimum Instruction Time : 0**

**Correct Marks : 5 Wrong Marks : 1**

**Question Key Details :**

Key	Value
Comprehension	Comp1

ਹੇਠਾਂ ਦਿੱਤੇ ਪੈਰੇ ਨੂੰ ਧਿਆਨ ਨਾਲ ਪੜ੍ਹੋ ਅਤੇ ਪ੍ਰਸ਼ਨ 41 ਤੋਂ 45 ਤੱਕ ਉੱਤਰ ਦਿਓ

2010 ਵਿੱਚ, ਭਾਰਤ ਦੀ ਰਾਸ਼ਟਰੀ ਕਾਨੂੰਨੀ ਸੇਵਾਵਾਂ ਅਥਾਰਟੀ ਨੇ ਕਾਨੂੰਨੀ ਸੇਵਾਵਾਂ ਅਥਾਰਟੀ ਐਕਟ 1987 ਦੀ ਧਾਰਾ 29 ਅਧੀਨ ਆਪਣੀ ਸ਼ਕਤੀ ਦੀ ਵਰਤੋਂ ਕਰਦੇ ਹੋਏ ਰਾਸ਼ਟਰੀ ਕਾਨੂੰਨੀ ਸੇਵਾਵਾਂ ਅਥਾਰਟੀ ( ਮੁਫਤ ਅਤੇ ਸਮਰੱਥ ਕਾਨੂੰਨੀ ਸੇਵਾਵਾਂ ) ਨਿਯਮਾਂ ਨੂੰ ਅਪਣਾਇਆ ਹੈ। ਨਿਯਮ ਉਚੱਤਮ ਅਦਾਲਤ, ਉਚ ਅਦਾਲਤ, ਰਾਜ, ਜ਼ਿਲ੍ਹਿਆਂ ਅਤੇ ਤਾਲੁਕਾਂ ਦੀ ਕਾਨੂੰਨੀ ਸੇਵਾਵਾਂ ਕਮੇਟੀਆਂ ਤੇ ਲਾਗੂ ਹੁੰਦੇ ਹਨ। ਕਾਨੂੰਨੀ ਸੇਵਾ ਸੰਸਥਾ ਕੋਲ ਲੋੜੀਂਦੇ ਤਜਰਬੇ ਵਾਲੇ ਕਾਨੂੰਨੀ ਪ੍ਰੈਕਟੀਸ਼ਨਰਾਂ ਤੋਂ ਅਰਜ਼ੀਆਂ ਮੰਗਣ ਦਾ ਅਧਿਕਾਰ ਹੈ ਤਾਂ ਜੋ ਉਹ ਕੇਸਾਂ ਦੀ ਕਿਸਮ ਨੂੰ ਦਰਸਾਉਣ ਜੋ ਉਹਨਾਂ ਨੂੰ ਸੌਖੇ ਗਏ ਹਨ।

ਕਾਨੂੰਨੀ ਸਹਾਇਤਾ ਵਕੀਲਾਂ ਦਾ ਪੈਨਲ ਮੁੜ ਸਥਾਪਿਤ ਹੁੰਦਾ ਹੈ?

1. ਹਰੇਕ ਸਾਲ
2. ਹਰੇਕ ਤਿੰਨ ਸਾਲ
3. ਹਰੇਕ 5 ਸਾਲ
4. ਹਰੇਕ 2 ਸਾਲ

**Options :**

485584135505. 1  
485584135506. 2  
485584135507. 3  
485584135508. 4

**Question Number : 243 Question Id : 48558433878 Question Type : MCQ Option Shuffling : No Is Question Mandatory : No Calculator : None Response Time : N.A Think Time : N.A Minimum Instruction Time : 0**

**Correct Marks : 5 Wrong Marks : 1**

**Question Key Details :**

Key	Value
-----	-------

Read the passage and answer the following questions:-

"In 2010, the National Legal Services Authority of India (NALSA) adopted the National Legal Service Authority (Free and Competent Legal Services) Regulations in exercise of its power under Section 29 of Legal Service Authorities Act, 1987. The regulations are applicable to Legal Service Committees of the Supreme Court, High Courts, the States, districts and taluks. The legal service institution is vested with authority to invite applications from legal practitioners with requisite experience to indicate the type of cases they are entrusted with."

For legal aid, services of senior lawyers can be availed only in

1. Murder cases
2. where there is threat to life and liberty of the applicant
3. financial matter
4. court martial

**Options :**

485584135509. 1  
485584135510. 2  
485584135511. 3  
485584135512. 4

**Question Number : 243 Question Id : 48558433878 Question Type : MCQ Option Shuffling : No Is Question Mandatory : No Calculator : None Response Time : N.A Think Time : N.A Minimum Instruction Time : 0**

**Correct Marks : 5 Wrong Marks : 1**

**Question Key Details :**

Key	Value
Comprehension	Comp1

ਹੇਠਾਂ ਦਿੱਤੇ ਪੈਰੇ ਨੂੰ ਧਿਆਨ ਨਾਲ ਪੜ੍ਹੋ ਅਤੇ ਪ੍ਰਸ਼ਨ 41 ਤੋਂ 45 ਤੱਕ ਉੱਤਰ ਦਿਓ

2010 ਵਿੱਚ, ਭਾਰਤ ਦੀ ਰਾਸ਼ਟਰੀ ਕਾਨੂੰਨੀ ਸੇਵਾਵਾਂ ਅਥਾਰਟੀ ਨੇ ਕਾਨੂੰਨੀ ਸੇਵਾਵਾਂ ਅਥਾਰਟੀ ਐਕਟ 1987 ਦੀ ਧਾਰਾ 29 ਅਧੀਨ ਆਪਣੀ ਸ਼ਕਤੀ ਦੀ ਵਰਤੋਂ ਕਰਦੇ ਹੋਏ ਰਾਸ਼ਟਰੀ ਕਾਨੂੰਨੀ ਸੇਵਾਵਾਂ ਅਥਾਰਟੀ ( ਮੁਫਤ ਅਤੇ ਸਮਰੱਥ ਕਾਨੂੰਨੀ ਸੇਵਾਵਾਂ ) ਨਿਯਮਾਂ ਨੂੰ ਅਪਣਾਇਆ ਹੈ। ਨਿਯਮ ਉਚੱਤਮ ਅਦਾਲਤ, ਉਚ ਅਦਾਲਤ, ਰਾਜ, ਜਿਲ੍ਹਿਆਂ ਅਤੇ ਤਾਲੁਕਾਂ ਦੀ ਕਾਨੂੰਨੀ ਸੇਵਾਵਾਂ ਕਮੇਟੀਆਂ ਤੇ ਲਾਗੂ ਹੁੰਦੇ ਹਨ। ਕਾਨੂੰਨੀ ਸੇਵਾ ਸੰਸਥਾ ਕੋਲ ਲੋੜੀਂਦੇ ਤਜਰਬੇ ਵਾਲੇ ਕਾਨੂੰਨੀ ਪ੍ਰੈਕਟੀਸ਼ਨਰਾਂ ਤੋਂ ਅਰਜ਼ੀਆਂ ਮੰਗਣ ਦਾ ਅਧਿਕਾਰ ਹੈ ਤਾਂ ਜੋ ਉਹ ਕੇਸਾਂ ਦੀ ਕਿਸਮ ਨੂੰ ਦਰਸਾਉਣ ਜੋ ਉਹਨਾਂ ਨੂੰ ਸੌਖੇ ਗਏ ਹਨ।

ਕਾਨੂੰਨੀ ਸਹਾਇਤਾ ਲਈ, ਵਰਿਸ਼ਟ ਵਕੀਲਾਂ ਦੀਆਂ ਸੇਵਾਵਾਂ ਪ੍ਰਾਪਤ ਕੀਤੀਆਂ ਜਾ ਸਕਦੀਆਂ ਹਨ ਕੇਵਲ :-

1. ਕਤਲ ਕੇਸਾਂ ਵਿੱਚ
2. ਜਿੱਥੇ ਆਵੇਦਕ ਦੇ ਜੀਵਨ ਅਤੇ ਆਜ਼ਾਦੀ ਨੂੰ ਖਤਰਾ ਹੋਵੇ
3. ਵਿੱਤੀ ਵਿਸ਼ੇ ਵਿੱਚ
4. ਅਦਾਲਤੀ ਸਮੱਗਰੀ ਵਿੱਚ

**Options :**

- 485584135509. 1
- 485584135510. 2
- 485584135511. 3
- 485584135512. 4

**Question Number : 244 Question Id : 48558433879 Question Type : MCQ Option Shuffling : No Is Question Mandatory : No Calculator : None Response Time : N.A Think Time : N.A Minimum Instruction Time : 0**

**Correct Marks : 5 Wrong Marks : 1**

**Question Key Details :**

Key	Value
Comprehension	Comp1

Read the passage and answer the following questions:-

"In 2010, the National Legal Services Authority of India (NALSA) adopted the National Legal Service Authority (Free and Competent Legal Services) Regulations in exercise of its power under Section 29 of Legal Service Authorities Act, 1987. The regulations are applicable to Legal Service Committees of the Supreme Court, High Courts, the States, districts and taluks. The legal service institution is vested with authority to invite applications from legal practitioners with requisite experience to indicate the type of cases they are entrusted with."

Panel lawyers are paid fee in accordance with

1. State regulations
2. BCI norms
3. Central government scale
4. UGC norms

**Options :**

- 485584135513. 1
- 485584135514. 2
- 485584135515. 3
- 485584135516. 4

**Question Number : 244 Question Id : 48558433879 Question Type : MCQ Option Shuffling : No Is Question Mandatory : No Calculator : None Response Time : N.A Think Time : N.A Minimum Instruction Time : 0**

**Correct Marks : 5 Wrong Marks : 1**

**Question Key Details :**

Key	Value
Comprehension	Comp1

ਹੇਠਾਂ ਦਿੱਤੇ ਪੈਰੇ ਨੂੰ ਧਿਆਨ ਨਾਲ ਪੜ੍ਹੋ ਅਤੇ ਪ੍ਰਸ਼ਨ 41 ਤੋਂ 45 ਤੱਕ ਉੱਤਰ ਦਿਓ

2010 ਵਿੱਚ, ਭਾਰਤ ਦੀ ਰਾਸ਼ਟਰੀ ਕਾਨੂੰਨੀ ਸੇਵਾਵਾਂ ਅਥਾਰਟੀ ਨੇ ਕਾਨੂੰਨੀ ਸੇਵਾਵਾਂ ਅਥਾਰਟੀ ਐਕਟ 1987 ਦੀ ਧਾਰਾ 29 ਅਧੀਨ ਆਪਣੀ ਸ਼ਕਤੀ ਦੀ ਵਰਤੋਂ ਕਰਦੇ ਹੋਏ ਰਾਸ਼ਟਰੀ ਕਾਨੂੰਨੀ ਸੇਵਾਵਾਂ ਅਥਾਰਟੀ ( ਮੁਫਤ ਅਤੇ ਸਮਰੱਥ ਕਾਨੂੰਨੀ ਸੇਵਾਵਾਂ ) ਨਿਯਮਾਂ ਨੂੰ ਅਪਣਾਇਆ ਹੈ। ਨਿਯਮ ਉਚੱਤਮ ਅਦਾਲਤ, ਉੱਚ ਅਦਾਲਤ, ਰਾਜ, ਜਿਲ੍ਹਿਆਂ ਅਤੇ ਤਾਲੁਕਾਂ ਦੀ ਕਾਨੂੰਨੀ ਸੇਵਾਵਾਂ ਕਮੇਟੀਆਂ ਤੇ ਲਾਗੂ ਹੁੰਦੇ ਹਨ। ਕਾਨੂੰਨੀ ਸੇਵਾ ਸੰਸਥਾ ਕੋਲ ਲੋੜੀਂਦੇ ਤਜਰਬੇ ਵਾਲੇ ਕਾਨੂੰਨੀ ਪ੍ਰੈਕਟੀਸ਼ਨਰਾਂ ਤੋਂ ਅਰਜ਼ੀਆਂ ਮੰਗਣ ਦਾ ਅਧਿਕਾਰ ਹੈ ਤਾਂ ਜੋ ਉਹ ਕੇਸਾਂ ਦੀ ਕਿਸਮ ਨੂੰ ਦਰਸਾਉਣ ਜੋ ਉਹਨਾਂ ਨੂੰ ਸੌਂਪੇ ਗਏ ਹਨ।

ਪੈਨਲ ਵਕੀਲਾਂ ਨੂੰ ਫੀਸ ਦਿੱਤੀ ਜਾਂਦੀ ਹੈ:-

1. ਰਾਜ ਨਿਯਮਾਂ ਅਨੁਸਾਰ
2. BCI ਨਿਯਮਾਂ ਅਨੁਸਾਰ
3. ਕੇਂਦਰੀ ਸਰਕਾਰੀ ਪੈਮਾਨੇ ਅਨੁਸਾਰ
4. UGC ਨਿਯਮਾਂ ਅਨੁਸਾਰ

**Options :**

485584135513. 1  
485584135514. 2  
485584135515. 3  
485584135516. 4

**Question Number : 245 Question Id : 48558433880 Question Type : MCQ Option Shuffling : No Is Question Mandatory : No Calculator : None Response Time : N.A Think Time : N.A Minimum Instruction Time : 0**

**Correct Marks : 5 Wrong Marks : 1**

**Question Key Details :**

Key	Value
Comprehension	Comp1

Read the passage and answer the following questions:-

"In 2010, the National Legal Services Authority of India (NALSA) adopted the National Legal Service Authority (Free and Competent Legal Services) Regulations in exercise of its power under Section 29 of Legal Service Authorities Act, 1987. The regulations are applicable to Legal Service Committees of the Supreme Court, High Courts, the States, districts and taluks. The legal service institution is vested with authority to invite applications from legal practitioners with requisite experience to indicate the type of cases they are entrusted with."

Pre-litigation legal services include:

1. Legal education
2. Arbitration
3. Out of court settlement
4. appearance before judge

**Options :**

485584135517. 1  
485584135518. 2  
485584135519. 3  
485584135520. 4

**Question Number : 245 Question Id : 48558433880 Question Type : MCQ Option Shuffling : No Is Question Mandatory : No Calculator : None Response Time : N.A Think Time : N.A Minimum Instruction Time : 0**

**Correct Marks : 5 Wrong Marks : 1**

**Question Key Details :**

Key	Value
Comprehension	Comp1

ਹੇਠਾਂ ਦਿੱਤੇ ਪੈਰੇ ਨੂੰ ਧਿਆਨ ਨਾਲ ਪੜ੍ਹੋ ਅਤੇ ਪ੍ਰਸ਼ਨ 41 ਤੋਂ 45 ਤੱਕ ਉੱਤਰ ਦਿਓ

2010 ਵਿੱਚ, ਭਾਰਤ ਦੀ ਰਾਸ਼ਟਰੀ ਕਾਨੂੰਨੀ ਸੇਵਾਵਾਂ ਅਥਾਰਟੀ ਨੇ ਕਾਨੂੰਨੀ ਸੇਵਾਵਾਂ ਅਥਾਰਟੀ ਐਕਟ 1987 ਦੀ ਧਾਰਾ 29 ਅਧੀਨ ਆਪਣੀ ਸ਼ਕਤੀ ਦੀ ਵਰਤੋਂ ਕਰਦੇ ਹੋਏ ਰਾਸ਼ਟਰੀ ਕਾਨੂੰਨੀ ਸੇਵਾਵਾਂ ਅਥਾਰਟੀ ( ਮੁਫਤ ਅਤੇ ਸਮਰੱਥ ਕਾਨੂੰਨੀ ਸੇਵਾਵਾਂ ) ਨਿਯਮਾਂ ਨੂੰ ਅਪਣਾਇਆ ਹੈ। ਨਿਯਮ ਉਚੱਤਮ ਅਦਾਲਤ, ਉਚ ਅਦਾਲਤ, ਰਾਜੀ, ਜਿਲਿਆਂ ਅਤੇ ਤਾਲੁਕਾਂ ਦੀ ਕਾਨੂੰਨੀ ਸੇਵਾਵਾਂ ਕਮੇਟੀਆਂ ਤੇ ਲਾਗੂ ਹੁੰਦੇ ਹਨ। ਕਾਨੂੰਨੀ ਸੇਵਾ ਸੰਸਥਾ ਕੋਲ ਲੋੜੀਂਦੇ ਤਜਰਬੇ ਵਾਲੇ ਕਾਨੂੰਨੀ ਪ੍ਰੋਕੀਸ਼ਨਰਾਂ ਤੋਂ ਅਰਜੀਆਂ ਮੰਗਣ ਦਾ ਅਧਿਕਾਰ ਹੈ ਤਾਂ ਜੋ ਉਹ ਕੇਸਾਂ ਦੀ ਕਿਸਮ ਨੂੰ ਦਰਸਾਉਣ ਜੋ ਉਹਨਾਂ ਨੂੰ ਸੌਖੇ ਰਾਏ ਹਨ।

ਮੁੱਕਦਮੇ ਤੋਂ ਪਹਿਲਾਂ ਕਾਨੂੰਨੀ ਸੇਵਾਵਾਂ ਵਿੱਚ ਸ਼ਾਮਿਲ ਹੈ:-

1. ਕਾਨੂੰਨੀ ਸਿੱਖਿਆ
2. ਸਲਮੀ
3. ਅਦਾਲਤ ਤੋਂ ਬਾਹਰ ਸਮਝੌਤਾ
4. ਜੱਜ ਅੱਗੇ ਪੇਸ਼ੀ

**Options :**

485584135517. 1  
485584135518. 2  
485584135519. 3  
485584135520. 4

**Sub-Section Number :** 3  
**Sub-Section Id :** 4855842433  
**Question Shuffling Allowed :** No  
**Is Section Default? :** null

**Question Number : 246 Question Id : 48558433881 Question Type : MCQ Option Shuffling : No Is Question Mandatory : No Calculator : None Response Time : N.A Think Time : N.A Minimum Instruction Time : 0**

**Correct Marks : 5 Wrong Marks : 1**

**Question Key Details :**

Key	Value
Comprehension	Comp2

The quasi-judicial bodies typically are public administrative agencies under the realm of the executive branch and are largely bestowed with authority similar to courts. These bodies have the power to resolve disputes and also impose punishments. Examples of quasi-judicial institutions include, national and state human rights commissions, consumer redressal forums and commissions, income tax tribunals, and so on. Some of these bodies relating specifically to human rights institutions that include, the National Human Rights Commission, National Commission for Minorities, National Commission for Women, National Commission for Scheduled Castes and the National Commission for Scheduled Tribes. These commissions are independent or autonomous and transparent bodies that are created under specific legislations to promote and protect human rights; for example, the National and State Human Rights Commissions are governed by the Protection of Human Rights Act, 1993. National commissions have jurisdiction over the entire nation and the parallel state commission take matters of human rights violations from the respective states.

The functioning of Quasi judicial bodies is similar to

1. Parliament
2. Judges
3. Magistrate
4. Courts

**Options :**

- 485584135521. 1
- 485584135522. 2
- 485584135523. 3
- 485584135524. 4

**Question Number : 246 Question Id : 48558433881 Question Type : MCQ Option Shuffling : No Is Question Mandatory : No Calculator : None Response Time : N.A Think Time : N.A Minimum Instruction Time : 0**

**Correct Marks : 5 Wrong Marks : 1**

**Question Key Details :**

Key	Value
Comprehension	Comp2

ਅਰਧ ਨਿਆਂਇਕ ਸੰਸਥਾਵਾਂ ਆਮ ਤੌਰ ਤੇ ਕਾਰਜਕਾਰੀ ਸਾਖਾ ਦੇ ਅਧੀਨ ਜਨਤਕ ਪ੍ਰਸ਼ਾਸਕੀ ਏਜੰਸੀਆਂ ਹੁੰਦੀਆਂ ਹਨ ਅਤੇ ਇਨ੍ਹਾਂ ਨੂੰ ਸੰਸਥਾਵਾਂ ਨੂੰ ਝਗੜਿਆਂ ਨੂੰ ਹੱਲ ਕਰਨ ਅਤੇ ਸਜ਼ਾਵਾਂ ਦੇਣ ਦਾ ਅਧਿਕਾਰ ਹੁੰਦਾ ਹੈ। ਅਰਧ ਨਿਆਂਇਕ ਸੰਸਥਾਵਾਂ ਦੀ ਉਦਾਹਰਣ ਵਿੱਚ, ਰਾਸ਼ਟਰੀ ਅਤੇ ਰਾਜ ਮਨੁੱਖੀ ਅਧਿਕਾਰ ਕਮਿਸ਼ਨ, ਖਪਤਕਾਰ ਝਗੜੇ ਫੋਰਮ ਅਤੇ ਕਮਿਸ਼ਨਜ਼, ਆਮਦਨ ਕਰ ਟ੍ਰਿਬਿਊਨਜ਼ ਅਤੇ ਬਹੁਤ ਸਾਰੇ ਹੋਰ ਆ ਜਾਂਦੇ ਹਨ। ਇਨ੍ਹਾਂ ਵਿੱਚੋਂ ਕੁਝ ਸੰਸਥਾਵਾਂ ਵਿਸ਼ੇਸ਼ ਤੌਰ ਤੇ ਮਨੁੱਖੀ ਅਧਿਕਾਰਾਂ ਨਾਲ ਜੁੜੀਆਂ ਹੁੰਦੀਆਂ ਹਨ, ਜਿਨ੍ਹਾਂ ਵਿੱਚ ਰਾਸ਼ਟਰੀ ਮਨੁੱਖੀ ਅਧਿਕਾਰ ਕਮਿਸ਼ਨ, ਰਾਸ਼ਟਰੀ ਘੱਟ-ਗਿਣਤੀ ਕਮਿਸ਼ਨ, ਰਾਸ਼ਟਰੀ ਅੰਤਰ ਕਮਿਸ਼ਨ, ਸ਼ਿਡਿਊਲ ਕਾਸਟ ਲਈ ਰਾਸ਼ਟਰੀ ਕਮਿਸ਼ਨ ਅਤੇ ਰਾਸ਼ਟਰੀ ਕਮਿਸ਼ਨ ਫਾਰ ਸ਼ਿਡਿਊਲ ਟਰਾਈਬਜ਼ ਆਦਿ। ਇਹ ਕਮਿਸ਼ਨ ਸੁਤੰਤਰ ਜਾਂ ਖੁਦ-ਮੁਖਤਿਆਰ ਹੁੰਦੇ ਹਨ ਅਤੇ ਇਹ ਪਾਰਦਰਸ਼ੀ ਸੰਸਥਾਵਾਂ ਵਿਸ਼ੇਸ਼ ਵਿਧਾਨਕ ਰਾਹੀਂ ਮਨੁੱਖੀ ਅਧਿਕਾਰਾਂ ਨੂੰ ਉਤਸ਼ਾਹਤ ਕਰਨ ਲਈ ਸਿਰਜੇ ਜਾਂਦੇ ਹਨ। ਉਦਾਹਰਣ ਦੇ ਤੌਰ ਤੇ ਰਾਸ਼ਟਰੀ ਅਤੇ ਰਾਜ ਮਨੁੱਖੀ ਅਧਿਕਾਰ ਕਮਿਸ਼ਨ 1993 ਦੇ ਮਨੁੱਖੀ ਅਧਿਕਾਰ ਐਕਟ ਦੀ ਸੁਰੱਖਿਆ ਦੇ ਅਧੀਨ ਸੰਚਾਲਤ ਕੀਤਾ ਗਿਆ। ਰਾਸ਼ਟਰੀ ਕਮਿਸ਼ਨ ਦਾ ਅਧਿਕਾਰ ਖੇਤਰ ਪੂਰਾ ਰਾਸ਼ਟਰ ਆ ਜਾਂਦਾ ਹੈ ਜਦੋਂ ਕਿ ਇਸ ਦੇ ਸਮਾਨ ਅੰਤਰ ਰਾਜ ਕਮਿਸ਼ਨ ਰਾਜ ਦੇ ਮਨੁੱਖੀ ਅਧਿਕਾਰਾਂ ਦੀ ਉਲੰਘਣਾ ਦੇ ਮਸਲੇ ਸੰਬੰਧਤ ਰਾਜ ਹੀ ਦੇਖਦੇ ਹਨ।

ਅਰਧ-ਨਿਯੰਤਰਿਤ ਸੰਸਥਾਵਾਂ ਦਾ ਕਾਰਜ ਸਮਾਨ ਹੈ?

1. ਸੰਸਦ ਦੇ
2. ਜੱਜਾਂ ਦੇ
3. ਮੈਜਿਸਟਰੇਟ ਦੇ
4. ਅਦਾਲਤਾਂ ਦੇ

**Options :**

485584135521. 1  
485584135522. 2  
485584135523. 3  
485584135524. 4

**Question Number : 247 Question Id : 48558433882 Question Type : MCQ Option Shuffling : No Is Question Mandatory : No Calculator : None Response Time : N.A Think Time : N.A Minimum Instruction Time : 0**

**Correct Marks : 5 Wrong Marks : 1**

**Question Key Details :**

Key	Value
Comprehension	Comp2

The quasi-judicial bodies typically are public administrative agencies under the realm of the executive branch and are largely bestowed with authority similar to courts. These bodies have the power to resolve disputes and also impose punishments. Examples of quasi-judicial institutions include, national and state human rights commissions, consumer redressal forums and commissions, income tax tribunals, and so on. Some of these bodies relating specifically to human rights institutions that include, the National Human Rights Commission, National Commission for Minorities, National Commission for Women, National Commission for Scheduled Castes and the National Commission for Scheduled Tribes. These commissions are independent or autonomous and transparent bodies that are created under specific legislations to promote and protect human rights; for example, the National and State Human Rights Commissions are governed by the Protection of Human Rights Act, 1993. National commissions have jurisdiction over the entire nation and the parallel state commission take matters of human rights violations from the respective states.

Which one of the following is not a Quasi judicial body

1. Human Rights Commission
2. Consumer Forums
3. Income Tax Tribunals
4. Parliament

**Options :**

485584135525. 1  
485584135526. 2  
485584135527. 3  
485584135528. 4

**Question Number : 247 Question Id : 48558433882 Question Type : MCQ Option Shuffling : No Is Question Mandatory : No Calculator : None Response Time : N.A Think Time : N.A Minimum Instruction Time : 0**

**Correct Marks : 5 Wrong Marks : 1**

**Question Key Details :**

Key	Value
Comprehension	Comp2

ਅਰਧ ਨਿਆਂਇਕ ਸੰਸਥਾਵਾਂ ਆਮ ਤੌਰ ਤੇ ਕਾਰਜਕਾਰੀ ਸਾਖਾ ਦੇ ਅਧੀਨ ਜਨਤਕ ਪ੍ਰਸ਼ਾਸਕੀ ਏਜੰਸੀਆਂ ਹੁੰਦੀਆਂ ਹਨ ਅਤੇ ਇਨ੍ਹਾਂ ਨੂੰ ਸੰਸਥਾਵਾਂ ਨੂੰ ਝਗੜਿਆਂ ਨੂੰ ਹੱਲ ਕਰਨ ਅਤੇ ਸਜਾਵਾਂ ਦੇਣ ਦਾ ਅਧਿਕਾਰ ਹੁੰਦਾ ਹੈ। ਅਰਧ ਨਿਆਂਇਕ ਸੰਸਥਾਵਾਂ ਦੀ ਉਦਾਹਰਣ ਵਿੱਚ, ਰਾਸ਼ਟਰੀ ਅਤੇ ਰਾਜ ਮਨੁੱਖੀ ਅਧਿਕਾਰ ਕਮਿਸ਼ਨ, ਖਪਤਕਾਰ ਝਗੜੇ ਫੋਰਮ ਅਤੇ ਕਮਿਸ਼ਨਜ਼, ਆਮਦਨ ਕਰ ਟ੍ਰਿਬਿਊਨਲ ਅਤੇ ਬਹੁਤ ਸਾਰੇ ਹੋਰ ਆ ਜਾਂਦੇ ਹਨ। ਇਨ੍ਹਾਂ ਵਿੱਚੋਂ ਕੁਝ ਸੰਸਥਾਵਾਂ ਵਿਸ਼ੇਸ਼ ਤੌਰ ਤੇ ਮਨੁੱਖੀ ਅਧਿਕਾਰਾਂ ਨਾਲ ਜੁੜੀਆਂ ਹੁੰਦੀਆਂ ਹਨ, ਜਿਨ੍ਹਾਂ ਵਿੱਚ ਰਾਸ਼ਟਰੀ ਮਨੁੱਖੀ ਅਧਿਕਾਰ ਕਮਿਸ਼ਨ, ਰਾਸ਼ਟਰੀ ਘੱਟ-ਗਿਣਤੀ ਕਮਿਸ਼ਨ, ਰਾਸ਼ਟਰੀ ਔਰਤ ਕਮਿਸ਼ਨ, ਸਫ਼ਿਊਲ ਕਾਸਟ ਲਈ ਰਾਸ਼ਟਰੀ ਕਮਿਸ਼ਨ ਅਤੇ ਰਾਸ਼ਟਰੀ ਕਮਿਸ਼ਨ ਫਾਰ ਸਫ਼ਿਊਲ ਟਰਾਈਬਜ਼ ਆਦਿ। ਇਹ ਕਮਿਸ਼ਨ ਸੁਤੰਤਰ ਜਾਂ ਖੁਦ-ਮੁਖਤਿਆਰ ਹੁੰਦੇ ਹਨ ਅਤੇ ਇਹ ਪਾਰਦਰਸ਼ੀ ਸੰਸਥਾਵਾਂ ਵਿਸ਼ੇਸ਼ ਵਿਧਾਨਕਾਂ ਰਾਹੀਂ ਮਨੁੱਖੀ ਅਧਿਕਾਰਾਂ ਨੂੰ ਉਤਸ਼ਾਹਤ ਕਰਨ ਲਈ ਸਿਰਜੇ ਜਾਂਦੇ ਹਨ। ਉਦਾਹਰਣ ਦੇ ਤੌਰ ਤੇ ਰਾਸ਼ਟਰੀ ਅਤੇ ਰਾਜ ਮਨੁੱਖੀ ਅਧਿਕਾਰ ਕਮਿਸ਼ਨ 1993 ਦੇ ਮਨੁੱਖੀ ਅਧਿਕਾਰ ਐਕਟ ਦੀ ਸੁਰੱਖਿਆ ਦੇ ਅਧੀਨ ਸੰਚਾਲਤ ਕੀਤਾ ਗਿਆ। ਰਾਸ਼ਟਰੀ ਕਮਿਸ਼ਨ ਦਾ ਅਧਿਕਾਰ ਖੇਤਰ ਪੂਰਾ ਰਾਸ਼ਟਰ ਆ ਜਾਂਦਾ ਹੈ ਜਦੋਂ ਕਿ ਇਸ ਦੇ ਸਮਾਨ ਅੰਤਰ ਰਾਜ ਕਮਿਸ਼ਨ ਰਾਜ ਦੇ ਮਨੁੱਖੀ ਅਧਿਕਾਰਾਂ ਦੀ ਉਲੰਘਣਾ ਦੇ ਮਸਲੇ ਸੰਬੰਧਤ ਰਾਜ ਹੀ ਦੇਖਦੇ ਹਨ।

ਨਿਮਨਲਿਖਤ ਵਿੱਚੋਂ ਕਿਹੜੀ ਅਰਧ-ਨਿਆਂਇਕ ਸੰਸਥਾ ਨਹੀਂ ਹੈ?

1. ਮਨੁੱਖੀ ਅਧਿਕਾਰ ਕਮਿਸ਼ਨ
2. ਖਪਤਕਾਰ ਫੋਰਮ
3. ਆਮਦਨ ਕਰ ਟ੍ਰਿਬਿਊਨਲ
4. ਸੰਸਦ

**Options :**

- 485584135525. 1
- 485584135526. 2
- 485584135527. 3
- 485584135528. 4

**Question Number : 248 Question Id : 48558433883 Question Type : MCQ Option Shuffling : No Is Question Mandatory : No Calculator : None Response Time : N.A Think Time : N.A Minimum Instruction Time : 0**

**Correct Marks : 5 Wrong Marks : 1**

**Question Key Details :**

Key	Value
Comprehension	Comp2

The quasi-judicial bodies typically are public administrative agencies under the realm of the executive branch and are largely bestowed with authority similar to courts. These bodies have the power to resolve disputes and also impose punishments. Examples of quasi-judicial institutions include, national and state human rights commissions, consumer redressal forums and commissions, income tax tribunals, and so on. Some of these bodies relating specifically to human rights institutions that include, the National Human Rights Commission, National Commission for Minorities, National Commission for Women, National Commission for Scheduled Castes and the National Commission for Scheduled Tribes. These commissions are independent or autonomous and transparent bodies that are created under specific legislations to promote and protect human rights; for example, the National and State Human Rights Commissions are governed by the Protection of Human Rights Act, 1993. National commissions have jurisdiction over the entire nation and the parallel state commission take matters of human rights violations from the respective states.



The National Human Rights Commission is enacted to protect

1. Geographical Rights
2. Human Rights
3. Patent Rights
4. Copyright Rights

**Options :**

485584135529. 1  
485584135530. 2  
485584135531. 3  
485584135532. 4

**Question Number : 248 Question Id : 48558433883 Question Type : MCQ Option Shuffling : No Is Question Mandatory : No Calculator : None Response Time : N.A Think Time : N.A Minimum Instruction Time : 0**

**Correct Marks : 5 Wrong Marks : 1**

**Question Key Details :**

Key	Value
Comprehension	Comp2

ਅਰਧ ਨਿਆਂਇਕ ਸੰਸਥਾਵਾਂ ਆਮ ਤੌਰ ਤੇ ਕਾਰਜਕਾਰੀ ਸਾਖਾ ਦੇ ਅਧੀਨ ਜਨਤਕ ਪ੍ਰਸ਼ਾਸਕੀ ਏਜੰਸੀਆਂ ਹੁੰਦੀਆਂ ਹਨ ਅਤੇ ਇਨ੍ਹਾਂ ਨੂੰ ਸੰਸਥਾਵਾਂ ਨੂੰ ਝਗੜਿਆਂ ਨੂੰ ਹੱਲ ਕਰਨ ਅਤੇ ਸਜ਼ਾਵਾਂ ਦੇਣ ਦਾ ਅਧਿਕਾਰ ਹੁੰਦਾ ਹੈ। ਅਰਧ ਨਿਆਂਇਕ ਸੰਸਥਾਵਾਂ ਦੀ ਉਦਾਹਰਣ ਵਿੱਚ, ਰਾਸ਼ਟਰੀ ਅਤੇ ਰਾਜ ਮਨੁੱਖੀ ਅਧਿਕਾਰ ਕਮਿਸ਼ਨ, ਖਪਤਕਾਰ ਝਗੜੇ ਫੋਰਮ ਅਤੇ ਕਮਿਸ਼ਨਜ਼, ਆਮਦਨ ਕਰ ਟਿੱਬਿਊਨਜ਼ ਅਤੇ ਬਹੁਤ ਸਾਰੇ ਹੋਰ ਆ ਜਾਂਦੇ ਹਨ। ਇਨ੍ਹਾਂ ਵਿੱਚੋਂ ਕੁਝ ਸੰਸਥਾਵਾਂ ਵਿਸ਼ੇਸ਼ ਤੌਰ ਤੇ ਮਨੁੱਖੀ ਅਧਿਕਾਰਾਂ ਨਾਲ ਜੁੜੀਆਂ ਹੁੰਦੀਆਂ ਹਨ, ਜਿਨ੍ਹਾਂ ਵਿੱਚ ਰਾਸ਼ਟਰੀ ਮਨੁੱਖੀ ਅਧਿਕਾਰ ਕਮਿਸ਼ਨ, ਰਾਸ਼ਟਰੀ ਘੱਟ-ਗਿਣਤੀ ਕਮਿਸ਼ਨ, ਰਾਸ਼ਟਰੀ ਅੰਤਰ ਕਮਿਸ਼ਨ, ਸ਼ਿਡਿਊਲ ਕਾਸਟ ਲਈ ਰਾਸ਼ਟਰੀ ਕਮਿਸ਼ਨ ਅਤੇ ਰਾਸ਼ਟਰੀ ਕਮਿਸ਼ਨ ਫਾਰ ਸ਼ਿਡਿਊਲ ਟਰਾਈਬਜ਼ ਆਦਿ। ਇਹ ਕਮਿਸ਼ਨ ਸੁਤੰਤਰ ਜਾਂ ਖੁਦ-ਮੁਖਤਿਆਰ ਹੁੰਦੇ ਹਨ ਅਤੇ ਇਹ ਪਾਰਦਰਸ਼ੀ ਸੰਸਥਾਵਾਂ ਵਿਸ਼ੇਸ਼ ਵਿਧਾਨਕਾਂ ਰਾਹੀਂ ਮਨੁੱਖੀ ਅਧਿਕਾਰਾਂ ਨੂੰ ਉਤਸ਼ਾਹਤ ਕਰਨ ਲਈ ਸਿਰਜੇ ਜਾਂਦੇ ਹਨ। ਉਦਾਹਰਣ ਦੇ ਤੌਰ ਤੇ ਰਾਸ਼ਟਰੀ ਅਤੇ ਰਾਜ ਮਨੁੱਖੀ ਅਧਿਕਾਰ ਕਮਿਸ਼ਨ 1993 ਦੇ ਮਨੁੱਖੀ ਅਧਿਕਾਰ ਐਕਟ ਦੀ ਸੁਰੱਖਿਆ ਦੇ ਅਧੀਨ ਸੰਚਾਲਤ ਕੀਤਾ ਗਿਆ। ਰਾਸ਼ਟਰੀ ਕਮਿਸ਼ਨ ਦਾ ਅਧਿਕਾਰ ਖੇਤਰ ਪੂਰਾ ਰਾਸ਼ਟਰ ਆ ਜਾਂਦਾ ਹੈ ਜਦੋਂ ਕਿ ਇਸ ਦੇ ਸਮਾਨ ਅੰਤਰ ਰਾਜ ਕਮਿਸ਼ਨ ਰਾਜ ਦੇ ਮਨੁੱਖੀ ਅਧਿਕਾਰਾਂ ਦੀ ਉਲੰਘਣਾ ਦੇ ਮਸਲੇ ਸੰਬੰਧਤ ਰਾਜ ਹੀ ਦੇਖਦੇ ਹਨ।

ਰਾਸ਼ਟਰੀ ਮਨੁੱਖੀ ਅਧਿਕਾਰ ਕਮਿਸ਼ਨ ਸੁਰੱਖਿਆ ਕਰਨ ਦੀ ਤਾਕਤ ਰੱਖਦਾ ਹੈ ?

1. ਭੂਗੋਲਿਕ ਅਧਿਕਾਰਾਂ ਦੀ
2. ਮਨੁੱਖੀ ਅਧਿਕਾਰਾਂ ਦੀ
3. ਪੇਟੈਂਟ ਅਧਿਕਾਰਾਂ ਦੀ
4. ਕਾਪੀ ਰਾਈਟ ਅਧਿਕਾਰਾਂ ਦੀ

**Options :**

485584135529. 1  
485584135530. 2  
485584135531. 3  
485584135532. 4

**Question Number : 249 Question Id : 48558433884 Question Type : MCQ Option Shuffling : No Is Question Mandatory : No Calculator : None Response Time : N.A Think Time : N.A Minimum Instruction Time : 0**

**Correct Marks : 5 Wrong Marks : 1**

**Question Key Details :**

Key	Value
Comprehension	Comp2

The quasi-judicial bodies typically are public administrative agencies under the realm of the executive branch and are largely bestowed with authority similar to courts. These bodies have the power to resolve disputes and also impose punishments. Examples of quasi-judicial institutions include, national and state human rights commissions, consumer redressal forums and commissions, income tax tribunals, and so on. Some of these bodies relating specifically to human rights institutions that include, the National Human Rights Commission, National Commission for Minorities, National Commission for Women, National Commission for Scheduled Castes and the National Commission for Scheduled Tribes. These commissions are independent or autonomous and transparent bodies that are created under specific legislations to promote and protect human rights; for example, the National and State Human Rights Commissions are governed by the Protection of Human Rights Act, 1993. National commissions have jurisdiction over the entire nation and the parallel state commission take matters of human rights violations from the respective states.

The State Human Rights Commission is subordinate to

1. Competition Commission of India
2. Supreme Court of India
3. High Court of the state
4. National Human Rights Commission

**Options :**

485584135533. 1  
 485584135534. 2  
 485584135535. 3  
 485584135536. 4

**Question Number : 249 Question Id : 48558433884 Question Type : MCQ Option Shuffling : No Is Question Mandatory : No Calculator : None Response Time : N.A Think Time : N.A Minimum Instruction Time : 0**

**Correct Marks : 5 Wrong Marks : 1**

**Question Key Details :**

Key	Value
Comprehension	Comp2

ਅਰਧ ਨਿਆਂਇਕ ਸੰਸਥਾਵਾਂ ਆਮ ਤੌਰ ਤੇ ਕਾਰਜਕਾਰੀ ਸ਼ਾਖਾ ਦੇ ਅਧੀਨ ਜਨਤਕ ਪ੍ਰਸ਼ਾਸਕੀ ਏਜੰਸੀਆਂ ਹੁੰਦੀਆਂ ਹਨ ਅਤੇ ਇਨ੍ਹਾਂ ਨੂੰ ਸੰਸਥਾਵਾਂ ਨੂੰ ਝਗੜਿਆਂ ਨੂੰ ਹੱਲ ਕਰਨ ਅਤੇ ਸਜ਼ਾਵਾਂ ਦੇਣ ਦਾ ਅਧਿਕਾਰ ਹੁੰਦਾ ਹੈ। ਅਰਧ ਨਿਆਂਇਕ ਸੰਸਥਾਵਾਂ ਦੀ ਉਦਾਹਰਣ ਵਿੱਚ, ਰਾਸ਼ਟਰੀ ਅਤੇ ਰਾਜ ਮਨੁੱਖੀ ਅਧਿਕਾਰ ਕਮਿਸ਼ਨ, ਖਪਤਕਾਰ ਝਗੜੇ ਫੋਰਮ ਅਤੇ ਕਮਿਸ਼ਨਜ਼, ਆਮਦਨ ਕਰ ਟ੍ਰਿਬਿਊਨਲਜ਼ ਅਤੇ ਬਹੁਤ ਸਾਰੇ ਹੋਰ ਆ ਜਾਂਦੇ ਹਨ। ਇਨ੍ਹਾਂ ਵਿੱਚੋਂ ਕੁਝ ਸੰਸਥਾਵਾਂ ਵਿਸ਼ੇਸ਼ ਤੌਰ ਤੇ ਮਨੁੱਖੀ ਅਧਿਕਾਰਾਂ ਨਾਲ ਜੁੜੀਆਂ ਹੁੰਦੀਆਂ ਹਨ, ਜਿਨ੍ਹਾਂ ਵਿੱਚ ਰਾਸ਼ਟਰੀ ਮਨੁੱਖੀ ਅਧਿਕਾਰ ਕਮਿਸ਼ਨ, ਰਾਸ਼ਟਰੀ ਘੱਟ-ਗਿਣਤੀ ਕਮਿਸ਼ਨ, ਰਾਸ਼ਟਰੀ ਅੰਤਰ ਕਮਿਸ਼ਨ, ਸ਼ਿਡਿਊਲ ਕਾਸਟ ਲਈ ਰਾਸ਼ਟਰੀ ਕਮਿਸ਼ਨ ਅਤੇ ਰਾਸ਼ਟਰੀ ਕਮਿਸ਼ਨ ਫਾਰ ਸ਼ਿਡਿਊਲ ਟਰਾਈਬਜ਼ ਆਦਿ। ਇਹ ਕਮਿਸ਼ਨ ਸੁਤੰਤਰ ਜਾਂ ਖੁਦ-ਮੁਖਤਿਆਰ ਹੁੰਦੇ ਹਨ ਅਤੇ ਇਹ ਪਾਰਦਰਸ਼ੀ ਸੰਸਥਾਵਾਂ ਵਿਸ਼ੇਸ਼ ਵਿਧਾਨਕਾਂ ਰਾਹੀਂ ਮਨੁੱਖੀ ਅਧਿਕਾਰਾਂ ਨੂੰ ਉਤਸ਼ਾਹਤ ਕਰਨ ਲਈ ਸਿਰਜੇ ਜਾਂਦੇ ਹਨ। ਉਦਾਹਰਣ ਦੇ ਤੌਰ ਤੇ ਰਾਸ਼ਟਰੀ ਅਤੇ ਰਾਜ ਮਨੁੱਖੀ ਅਧਿਕਾਰ ਕਮਿਸ਼ਨ 1993 ਦੇ ਮਨੁੱਖੀ ਅਧਿਕਾਰ ਐਕਟ ਦੀ ਸੁਰੱਖਿਆ ਦੇ ਅਧੀਨ ਸੰਚਾਲਤ ਕੀਤਾ ਗਿਆ। ਰਾਸ਼ਟਰੀ ਕਮਿਸ਼ਨ ਦਾ ਅਧਿਕਾਰ ਖੇਤਰ ਪੂਰਾ ਰਾਸ਼ਟਰ ਆ ਜਾਂਦਾ ਹੈ ਜਦੋਂ ਕਿ ਇਸ ਦੇ ਸਮਾਨ ਅੰਤਰ ਰਾਜ ਕਮਿਸ਼ਨ ਰਾਜ ਦੇ ਮਨੁੱਖੀ ਅਧਿਕਾਰਾਂ ਦੀ ਉਲੰਘਣਾ ਦੇ ਮਸਲੇ ਸੰਬੰਧਤ ਰਾਜ ਹੀ ਦੇਖਦੇ ਹਨ।

ਰਾਜ ਮਨੁੱਖੀ ਅਧਿਕਾਰ ਕਮਿਸ਼ਨ ਅਧੀਨ ਹੈ:-

1. ਕੰਪੀਟੀਸ਼ਨ ਕਮਿਸ਼ਨ ਆਫ ਇੰਡੀਆ ਦੇ
2. ਭਾਰਤ ਦੀ ਸਰਵ-ਉੱਚ ਅਦਾਲਤ ਦੇ
3. ਰਾਜ ਦੀ ਉੱਚ ਅਦਾਲਤ ਦੇ
4. ਰਾਸ਼ਟਰੀ ਮਨੁੱਖੀ ਅਧਿਕਾਰ ਕਮਿਸ਼ਨ ਦੇ

**Options :**

485584135533. 1
485584135534. 2
485584135535. 3
485584135536. 4

**Question Number : 250 Question Id : 48558433885 Question Type : MCQ Option Shuffling : No Is Question Mandatory : No Calculator : None Response Time : N.A Think Time : N.A Minimum Instruction Time : 0**

**Correct Marks : 5 Wrong Marks : 1**

**Question Key Details :**

Key	Value
Comprehension	Comp2

The quasi-judicial bodies typically are public administrative agencies under the realm of the executive branch and are largely bestowed with authority similar to courts. These bodies have the power to resolve disputes and also impose punishments. Examples of quasi-judicial institutions include, national and state human rights commissions, consumer redressal forums and commissions, income tax tribunals, and so on. Some of these bodies relating specifically to human rights institutions that include, the National Human Rights Commission, National Commission for Minorities, National Commission for Women, National Commission for Scheduled Castes and the National Commission for Scheduled Tribes. These commissions are independent or autonomous and transparent bodies that are created under specific legislations to promote and protect human rights; for example, the National and State Human Rights Commissions are governed by the Protection of Human Rights Act, 1993. National commissions have jurisdiction over the entire nation and the parallel state commission take matters of human rights violations from the respective states.

The National and State Human Rights Commission are governed under \_\_\_\_\_.

1. Environment Protection Act, 1986
2. Protection of Human Rights Act, 1993
3. Consumer of Protection Act, 2019
4. Protection of Civil Rights Act, 1955

**Options :**

485584135537. 1
485584135538. 2
485584135539. 3
485584135540. 4

Question Number : 250 Question Id : 48558433885 Question Type : MCQ Option Shuffling : No Is Question Mandatory : No Calculator : None Response Time : N.A Think Time : N.A Minimum Instruction Time : 0

Correct Marks : 5 Wrong Marks : 1

Question Key Details :

Key	Value
Comprehension	Comp2

ਅਰਧ ਨਿਆਂਇਕ ਸੰਸਥਾਵਾਂ ਆਮ ਤੌਰ ਤੇ ਕਾਰਜਕਾਰੀ ਸਾਖਾ ਦੇ ਅਧੀਨ ਜਨਤਕ ਪ੍ਰਸ਼ਾਸਕੀ ਏਜੰਸੀਆਂ ਹੁੰਦੀਆਂ ਹਨ ਅਤੇ ਇਨ੍ਹਾਂ ਨੂੰ ਸੰਸਥਾਵਾਂ ਨੂੰ ਝਗੜਿਆਂ ਨੂੰ ਹੱਲ ਕਰਨ ਅਤੇ ਸਜਾਵਾਂ ਦੇਣ ਦਾ ਅਧਿਕਾਰ ਹੁੰਦਾ ਹੈ। ਅਰਧ ਨਿਆਂਇਕ ਸੰਸਥਾਵਾਂ ਦੀ ਉਦਾਹਰਣ ਵਿੱਚ, ਰਾਸ਼ਟਰੀ ਅਤੇ ਰਾਜ ਮਨੁੱਖੀ ਅਧਿਕਾਰ ਕਮਿਸ਼ਨ, ਖਪਤਕਾਰ ਝਗੜੇ ਫੋਰਮ ਅਤੇ ਕਮਿਸ਼ਨਜ਼ ਆਮਦਨ ਕਰ ਟਿੱਬਿਊਨਜ਼ ਅਤੇ ਬਹੁਤ ਸਾਰੇ ਹੋਰ ਆ ਜਾਂਦੇ ਹਨ। ਇਨ੍ਹਾਂ ਵਿੱਚੋਂ ਕੁਝ ਸੰਸਥਾਵਾਂ ਵਿਸ਼ੇਸ਼ ਤੌਰ ਤੇ ਮਨੁੱਖੀ ਅਧਿਕਾਰਾਂ ਨਾਲ ਜੁੜੀਆਂ ਹੁੰਦੀਆਂ ਹਨ, ਜਿਨ੍ਹਾਂ ਵਿੱਚ ਰਾਸ਼ਟਰੀ ਮਨੁੱਖੀ ਅਧਿਕਾਰ ਕਮਿਸ਼ਨ, ਰਾਸ਼ਟਰੀ ਘੱਟ-ਗਿਣਤੀ ਕਮਿਸ਼ਨ, ਰਾਸ਼ਟਰੀ ਔਰਤ ਕਮਿਸ਼ਨ, ਸ਼ਿੱਠਿਊਲ ਕਾਸਟ ਲਈ ਰਾਸ਼ਟਰੀ ਕਮਿਸ਼ਨ ਅਤੇ ਰਾਸ਼ਟਰੀ ਕਮਿਸ਼ਨ ਫਾਰ ਸ਼ਿੱਠਿਊਲ ਟਰਾਈਬਜ਼ ਆਦਿ। ਇਹ ਕਮਿਸ਼ਨ ਸੁਤੰਤਰ ਜਾਂ ਖੁਦ-ਮੁਖਤਿਆਰ ਹੁੰਦੇ ਹਨ ਅਤੇ ਇਹ ਪਾਰਦਰਸ਼ੀ ਸੰਸਥਾਵਾਂ ਵਿਸ਼ੇਸ਼ ਵਿਧਾਨਕਾਂ ਰਾਹੀਂ ਮਨੁੱਖੀ ਅਧਿਕਾਰਾਂ ਨੂੰ ਉਤਸ਼ਾਹਤ ਕਰਨ ਲਈ ਸਿਰਜੇ ਜਾਂਦੇ ਹਨ। ਉਦਾਹਰਣ ਦੇ ਤੌਰ ਤੇ ਰਾਸ਼ਟਰੀ ਅਤੇ ਰਾਜ ਮਨੁੱਖੀ ਅਧਿਕਾਰ ਕਮਿਸ਼ਨ 1993 ਦੇ ਮਨੁੱਖੀ ਅਧਿਕਾਰ ਐਕਟ ਦੀ ਸੁਰੱਖਿਆ ਦੇ ਅਧੀਨ ਸੰਚਾਲਤ ਕੀਤਾ ਗਿਆ। ਰਾਸ਼ਟਰੀ ਕਮਿਸ਼ਨ ਦਾ ਅਧਿਕਾਰ ਖੇਤਰ ਪੂਰਾ ਰਾਸ਼ਟਰ ਆ ਜਾਂਦਾ ਹੈ ਜਦੋਂ ਕਿ ਇਸ ਦੇ ਸਮਾਨ ਅੰਤਰ ਰਾਜ ਕਮਿਸ਼ਨ ਰਾਜ ਦੇ ਮਨੁੱਖੀ ਅਧਿਕਾਰਾਂ ਦੀ ਉਲੰਘਣਾ ਦੇ ਮਸਲੇ ਸੰਬੰਧਤ ਰਾਜ ਹੀ ਦੇਖਦੇ ਹਨ।

ਰਾਸ਼ਟਰੀ ਅਤੇ ਰਾਜ ਮਨੁੱਖੀ ਅਧਿਕਾਰ ਕਮਿਸ਼ਨ \_\_\_\_\_ ਦੇ ਅਧੀਨ ਚਾਲਕ ਹਨ।

1. ਵਾਤਾਵਰਣ ਸੁਰੱਖਿਆ ਐਕਟ, 1986
2. ਮਨੁੱਖੀ ਅਧਿਕਾਰਾਂ ਦੀ ਸੁਰੱਖਿਆ ਐਕਟ, 1993
3. ਖਪਤਕਾਰ ਸੁਰੱਖਿਆ ਐਕਟ, 2019
4. ਸਿਵਲ ਅਧਿਕਾਰਾਂ ਦੀ ਸੁਰੱਖਿਆ ਐਕਟ, 1955

Options :

485584135537. 1
485584135538. 2
485584135539. 3
485584135540. 4

## Performing Arts

Group Number :	10
Group Id :	485584748
Group Maximum Duration :	45
Group Minimum Duration :	45
Show Attended Group? :	No
Edit Attended Group? :	No
Break time :	0
Group Marks :	200
Is this Group for Examiner? :	No
Examiner permission :	Cant View
Show Progress Bar? :	No

## Compulsory

Section Id :	485584862
Section Number :	1
Section type :	Online

<b>Mandatory or Optional :</b>	Mandatory
<b>Number of Questions :</b>	20
<b>Number of Questions to be attempted :</b>	20
<b>Section Marks :</b>	100
<b>Enable Mark as Answered Mark for Review and Clear Response :</b>	Yes
<b>Maximum Instruction Time :</b>	0
<b>Sub-Section Number :</b>	1
<b>Sub-Section Id :</b>	4855842434
<b>Question Shuffling Allowed :</b>	No
<b>Is Section Default? :</b>	null

**Question Number : 251 Question Id : 48558433616 Question Type : MCQ Option Shuffling : No Is Question Mandatory : No Calculator : None Response Time : N.A Think Time : N.A Minimum Instruction Time : 0**

**Correct Marks : 5 Wrong Marks : 1**

**Question Key Details :**

Key	Value
Comprehension	Comp1

Read the paragraph and answer the following questions:

Raga has been manifested through Anibaddha and Nibaddha. Anibaddha refers to free extempore development of a raga. In ancient period, it was done under the concept of Alapti. Alapti is of two types - Ragalapti and Rupkalapti. alapti is governed by Svasthana. there are four types of Svasthana known as Prathama, Dvitya, Tritiya and Chaturtha Svasthana. Rupkalapti is done in two steps, that is, Pratigrahanika and Bhanjani. Bhanjani can further be done in two ways which are Sthaya Bhanjani and Rupak Bhanjani.

Anibaddha is :

1. A composition fixed to Tala
2. A free extempore development of a raga
3. A composition set to Teental
4. A development of a raga with Tanas set to Tala

**Options :**

485584134461. 1  
485584134462. 2  
485584134463. 3  
485584134464. 4

**Question Number : 251 Question Id : 48558433616 Question Type : MCQ Option Shuffling : No Is Question Mandatory : No Calculator : None Response Time : N.A Think Time : N.A Minimum Instruction Time : 0**

**Correct Marks : 5 Wrong Marks : 1**

**Question Key Details :**

Key	Value
Comprehension	Comp1

ਰਾਗ ਅਨਿਬਧ ਅਤੇ ਨਿਬਧ ਦੁਆਰਾ ਪ੍ਰਗਟ ਹੋਇਆ ਹੈ। ਅਨਿਬਧਾ ਇੱਕ ਰਾਗ ਦੇ ਸੁਤੰਤਰ ਵਿਕਾਸ ਨੂੰ ਦਰਸਾਉਂਦਾ ਹੈ। ਪ੍ਰਾਚੀਨ ਕਾਲ ਵਿੱਚ ਇਹ ਅਲਾਪਤੀ ਦੀ ਧਾਰਨਾ ਅਧੀਨ ਕੀਤਾ ਜਾਂਦਾ ਸੀ। ਅਲਾਪਤੀ ਦੇ ਕਿਸਮਾਂ ਦੀ ਹੁੰਦੀ ਹੈ- ਰਾਗਾਲਪਤੀ ਅਤੇ ਰੂਪਕਾਲਪਤੀ। ਅਲਾਪਤੀ ਦਾ ਸੰਚਾਲਨ ਸਵਾਸਥਾਨਾ ਦੁਆਰਾ ਕੀਤਾ ਜਾਂਦਾ ਹੈ। ਇਥੇ ਚਾਰ ਕਿਸਮਾਂ ਦੇ ਸਵਾਸਥਨ ਹਨ- ਪ੍ਰਥਮਾ, ਦ੍ਵਿਤੀਆ, ਤ੍ਰਿਤੀਆ ਅਤੇ ਚਤੁਰਥਾ ਸਵਾਸਥਾਨਾ। ਰੂਪਕਾਲਪਤੀ ਦੇ ਪੜਾਵਾਂ ਵਿੱਚ ਕੀਤੀ ਜਾਂਦੀ ਹੈ ਜੋ ਕਿ ਪ੍ਰਤੀਗ੍ਰਹਿਮਿਕਾ ਅਤੇ ਭੰਜਨੀ ਹਨ। ਭੰਜਨੀ ਨੂੰ ਹੋਰ ਦੋ ਤਰੀਕਿਆਂ ਨਾਲ ਕੀਤਾ ਜਾ ਸਕਦਾ ਹੈ। ਜੋ ਕਿ ਸੰਥਾਈ ਭੰਜਨੀ ਅਤੇ ਰੂਪਕ ਭੰਜਨੀ ਹਨ।

ਉੱਪਰ ਲਿਖੇ ਪੈਰ੍ਹੇ ਨੂੰ ਪੜ੍ਹਨ ਤੋਂ ਬਾਅਦ ਹੇਠਾਂ ਲਿਖੇ ਪ੍ਰਸ਼ਨਾਂ ਦੇ ਉੱਤਰ ਦਿਓ:

ਅਨਿਬਧਾ ਹੈ:

1. ਤਾਲ ਲਈ ਸਥਿਰ (ਫਿਕਸ) ਇੱਕ ਰਚਨਾ।
2. ਇੱਕ ਰਾਗ ਦਾ ਤਤਕਾਲੀਨ ਵਿਕਾਸ
3. ਰਚਨਾ ਤੀਨਤਾਲ 'ਤੇ ਸੈੱਟ ਕੀਤੀ ਗਈ।
4. ਤਾਂ ਦੇ ਨਾਲ ਰਾਗ ਦਾ ਵਿਆਕਸ ਤਾਲ ਨੂੰ ਦਿੱਤਾ ਗਿਆ।

**Options :**

485584134461. 1  
 485584134462. 2  
 485584134463. 3  
 485584134464. 4

**Question Number : 252 Question Id : 48558433617 Question Type : MCQ Option Shuffling : No Is Question Mandatory : No Calculator : None Response Time : N.A Think Time : N.A Minimum Instruction Time : 0**

**Correct Marks : 5 Wrong Marks : 1**

**Question Key Details :**

Key	Value
Comprehension	Comp1

Read the paragraph and answer the following questions:

Raga has been manifested through Anibaddha and Nibaddha. Anibaddha refers to free extempore development of a raga. In ancient period, it was done under the concept of Alapti. Alapti is of two types - Ragalapti and Rupkalapti. alapti is governed by Svasthana. there are four types of Svasthana known as Prathama, Dvitya, Tritiya and Chaturtha Svasthana. Rupkalapti is done in two steps, that is, Pratigrahanika and Bhanjani. Bhanjani can further be done in two ways which are Sthaya Bhanjani and Rupak Bhanjani.

How many varieties of Alapti are there?

1. 2
2. 4
3. 5
4. 7

**Options :**

485584134465. 1  
 485584134466. 2  
 485584134467. 3

**Question Number : 252 Question Id : 48558433617 Question Type : MCQ Option Shuffling : No Is Question Mandatory : No Calculator : None Response Time : N.A Think Time : N.A Minimum Instruction Time : 0**

**Correct Marks : 5 Wrong Marks : 1**

**Question Key Details :**

Key	Value
Comprehension	Comp1

ਰਾਗ ਅਨਿਬਧ ਅਤੇ ਨਿਬਧ ਦੁਆਰਾ ਪ੍ਰਗਟ ਹੋਇਆ ਹੈ। ਅਨਿਬਧਾ ਇੱਕ ਰਾਗ ਦੇ ਸੁਤੰਤਰ ਵਿਕਾਸ ਨੂੰ ਦਰਸਾਉਂਦਾ ਹੈ। ਪ੍ਰਾਚੀਨ ਕਾਲ ਵਿੱਚ ਇਹ ਅਲਾਪਤੀ ਦੀ ਧਾਰਨਾ ਅਧੀਨ ਕੀਤਾ ਜਾਂਦਾ ਸੀ। ਅਲਾਪਤੀ ਦੇ ਕਿਸਮਾਂ ਦੀ ਹੁੰਦੀ ਹੈ- ਰਾਗਾਲਪਤੀ ਅਤੇ ਰੂਪਕਾਲਪਤੀ। ਅਲਾਪਤੀ ਦਾ ਸੰਚਾਲਨ ਸਵਾਸਥਾਨਾ ਦੁਆਰਾ ਕੀਤਾ ਜਾਂਦਾ ਹੈ। ਇਥੇ ਚਾਰ ਕਿਸਮਾਂ ਦੇ ਸਵਾਸਥਾਨ ਹਨ- ਪ੍ਰਥਮਾ, ਦ੍ਰਿਤਿਆ, ਤ੍ਰਿਤਿਆ ਅਤੇ ਚਤੁਰਥਾ ਸਵਾਸਥਾਨਾ। ਰੂਪਕਾਲਪਤੀ ਦੋ ਪੜਾਵਾਂ ਵਿੱਚ ਕੀਤੀ ਜਾਂਦੀ ਹੈ ਜੋ ਕਿ ਪ੍ਰਤੀਗ੍ਰਹਿਮਿਕਾ ਅਤੇ ਭੰਜਨੀ ਹਨ। ਭੰਜਨੀ ਨੂੰ ਹੋਰ ਦੋ ਤਰੀਕਿਆਂ ਨਾਲ ਕੀਤਾ ਜਾ ਸਕਦਾ ਹੈ। ਜੋ ਕਿ ਸੰਥਾਈ ਭੰਜਨੀ ਅਤੇ ਰੂਪਕ ਭੰਜਨੀ ਹਨ।

ਉੱਪਰ ਲਿਖੇ ਪੈਰ੍ਹੇ ਨੂੰ ਪੜ੍ਹਨ ਤੋਂ ਬਾਅਦ ਹੇਠਾਂ ਲਿਖੇ ਪ੍ਰਸ਼ਨਾਂ ਦੇ ਉੱਤਰ ਦਿਓ:

ਅਲਪਾਤੀ ਦੀਆਂ ਕਿੰਨੀਆਂ ਵੰਨਗੀਆਂ/ਕਿਸਮਾਂ ਇੱਥੇ ਹਨ:

1. 2
2. 4
3. 5
4. 7

**Options :**

485584134465. 1  
485584134466. 2  
485584134467. 3  
485584134468. 4

**Question Number : 253 Question Id : 48558433618 Question Type : MCQ Option Shuffling : No Is Question Mandatory : No Calculator : None Response Time : N.A Think Time : N.A Minimum Instruction Time : 0**

**Correct Marks : 5 Wrong Marks : 1**

**Question Key Details :**

Key	Value
Comprehension	Comp1

Read the paragraph and answer the following questions:

Raga has been manifested through Anibaddha and Nibaddha. Anibaddha refers to free extempore development of a raga. In ancient period, it was done under the concept of Alapti. Alapti is of two types - Ragalapti and Rupkalapti. alapti is governed by Svasthana. there are four types of Svasthana known as Prathama, Dvitya, Tritiya and Chaturtha Svasthana. Rupkalapti is done in two steps, that is, Pratigrahanika and Bhanjani. Bhanjani can further be done in two ways which are Sthaya Bhanjani and Rupak Bhanjani.

Alapti is governed by :

1. Sthaya
2. Nature of Tala
3. Svasthana
4. Nibaddha

**Options :**

485584134469. 1
485584134470. 2
485584134471. 3
485584134472. 4

**Question Number : 253 Question Id : 48558433618 Question Type : MCQ Option Shuffling : No Is Question Mandatory : No Calculator : None Response Time : N.A Think Time : N.A Minimum Instruction Time : 0**

**Correct Marks : 5 Wrong Marks : 1**

**Question Key Details :**

Key	Value
Comprehension	Comp1

ਰਾਗ ਅਨਿਬਧ ਅਤੇ ਨਿਬਧ ਦੁਆਰਾ ਪ੍ਰਗਟ ਹੋਇਆ ਹੈ। ਅਨਿਬਧਾ ਇੱਕ ਰਾਗ ਦੇ ਸੁਤੰਤਰ ਵਿਕਾਸ ਨੂੰ ਦਰਸਾਉਂਦਾ ਹੈ। ਪ੍ਰਾਚੀਨ ਕਾਲ ਵਿੱਚ ਇਹ ਅਲਾਪਤੀ ਦੀ ਧਾਰਨਾ ਅਧੀਨ ਕੀਤਾ ਜਾਂਦਾ ਸੀ। ਅਲਾਪਤੀ ਦੇ ਕਿਸਮਾਂ ਦੀ ਹੁੰਦੀ ਹੈ- ਰਾਗਾਲਪਤੀ ਅਤੇ ਰੂਪਕਾਲਪਤੀ। ਅਲਾਪਤੀ ਦਾ ਸੰਚਾਲਨ ਸਵਾਸਥਾਨਾ ਦੁਆਰਾ ਕੀਤਾ ਜਾਂਦਾ ਹੈ। ਇਥੇ ਚਾਰ ਕਿਸਮਾਂ ਦੇ ਸਵਾਸਥਾਨ ਹਨ- ਪ੍ਰਥਮਾ, ਦ੍ਰਿਤਿਆ, ਤ੍ਰਿਤਿਆ ਅਤੇ ਚਤੁਰਥਾ ਸਵਾਸਥਾਨ। ਰੂਪਕਾਲਪਤੀ ਦੋ ਪੜਾਵਾਂ ਵਿੱਚ ਕੀਤੀ ਜਾਂਦੀ ਹੈ ਜੋ ਕਿ ਪ੍ਰਤੀਗ੍ਰਹਿਮਿਕਾ ਅਤੇ ਭੰਜਨੀ ਹਨ। ਭੰਜਨੀ ਨੂੰ ਹੋਰ ਦੋ ਤਰੀਕਿਆਂ ਨਾਲ ਕੀਤਾ ਜਾ ਸਕਦਾ ਹੈ। ਜੋ ਕਿ ਸਥਾਈ ਭੰਜਨੀ ਅਤੇ ਰੂਪਕ ਭੰਜਨੀ ਹਨ।

ਉੱਪਰ ਲਿਖੇ ਧੇਰੇ ਨੂੰ ਪੜ੍ਹਨ ਤੋਂ ਬਾਅਦ ਹੇਠਾਂ ਲਿਖੇ ਪ੍ਰਸ਼ਨਾਂ ਦੇ ਉੱਤਰ ਦਿਓ:

ਅਲਪਾਤੀ ਕਿਸ ਦੁਆਰਾ ਸੰਚਾਲਿਤ ਕੀਤੀ ਜਾਂਦੀ ਹੈ:

1. ਸਥਾਈ
2. ਤਾਲ ਦੀ ਪ੍ਰਕ੍ਰਿਤੀ
3. ਸਵਾਸਥਾਨਾ
4. ਨਿਬਧਾ

**Options :**

485584134469. 1
485584134470. 2
485584134471. 3
485584134472. 4

**Question Number : 254 Question Id : 48558433619 Question Type : MCQ Option Shuffling : No Is Question Mandatory : No Calculator : None Response Time : N.A Think Time : N.A Minimum Instruction Time : 0**

**Correct Marks : 5 Wrong Marks : 1**

**Question Key Details :**

Key	Value
Comprehension	Comp1



Read the paragraph and answer the following questions:

Raga has been manifested through Anibaddha and Nibaddha. Anibaddha refers to free extempore development of a raga. In ancient period, it was done under the concept of Alapti. Alapti is of two types - Ragalapti and Rupkalapti. Alapti is governed by Svasthana. There are four types of Svasthana known as Prathama, Dvitya, Tritiya and Chaturtha Svasthana. Rupkalapti is done in two steps, that is, Pratigrahanika and Bhanjani. Bhanjani can further be done in two ways which are Sthaya Bhanjani and Rupak Bhanjani.

Pratigrahanika and Bhanjani are the varieties of :

1. Dhatu
2. Gram
3. Prathama
4. Rupkalapti

**Options :**

485584134473. 1
485584134474. 2
485584134475. 3
485584134476. 4

**Question Number : 254 Question Id : 48558433619 Question Type : MCQ Option Shuffling : No Is Question Mandatory : No Calculator : None Response Time : N.A Think Time : N.A Minimum Instruction Time : 0 Correct Marks : 5 Wrong Marks : 1**

**Question Key Details :**

Key	Value
Comprehension	Comp1

ਰਾਗ ਅਨਿਬਧ ਅਤੇ ਨਿਬਧ ਦੁਆਰਾ ਪ੍ਰਗਟ ਹੋਇਆ ਹੈ। ਅਨਿਬਧਾ ਇੱਕ ਰਾਗ ਦੇ ਸੁਤੰਤਰ ਵਿਕਾਸ ਨੂੰ ਦਰਸਾਉਂਦਾ ਹੈ। ਪ੍ਰਾਚੀਨ ਕਾਲ ਵਿੱਚ ਇਹ ਅਲਾਪਤੀ ਦੀ ਧਾਰਨਾ ਅਧੀਨ ਕੀਤਾ ਜਾਂਦਾ ਸੀ। ਅਲਾਪਤੀ ਦੇ ਕਿਸਮਾਂ ਦੀ ਹੁੰਦੀ ਹੈ- ਰਾਗਾਲਪਤੀ ਅਤੇ ਰੂਪਕਾਲਪਤੀ। ਅਲਾਪਤੀ ਦਾ ਸੰਚਾਲਨ ਸਵਾਸਥਾਨਾ ਦੁਆਰਾ ਕੀਤਾ ਜਾਂਦਾ ਹੈ। ਇਥੇ ਚਾਰ ਕਿਸਮਾਂ ਦੇ ਸਵਾਸਥਾਨ ਹਨ- ਪ੍ਰਥਮਾ, ਦ੍ਵਿਤੀਆ, ਤ੍ਰਿਤੀਆ ਅਤੇ ਚਤੁਰਥਾ ਸਵਾਸਥਾਨ। ਰੂਪਕਾਲਪਤੀ ਦੋ ਪੜਾਵਾਂ ਵਿੱਚ ਕੀਤੀ ਜਾਂਦੀ ਹੈ ਜੋ ਕਿ ਪ੍ਰਤੀਗ੍ਰਹਿਣਿਕਾ ਅਤੇ ਭਜਨੀ ਹਨ। ਭਜਨੀ ਨੂੰ ਹੋਰ ਦੋ ਤਰੀਕਿਆਂ ਨਾਲ ਕੀਤਾ ਜਾ ਸਕਦਾ ਹੈ। ਜੋ ਕਿ ਸਥਾਈ ਭਜਨੀ ਅਤੇ ਰੂਪਕ ਭਜਨੀ ਹਨ।

ਉੱਪਰ ਲਿਖੇ ਧੇਰੇ ਨੂੰ ਪੜ੍ਹਨ ਤੋਂ ਬਾਅਦ ਹੇਠਾਂ ਲਿਖੇ ਪ੍ਰਸ਼ਨਾਂ ਦੇ ਉੱਤਰ ਦਿਓ:

ਪ੍ਰਤੀਗ੍ਰਹਿਣਿਕਾ ਅਤੇ ਭਜਨੀ ਕਿਸਮਾਂ/ਵੰਨਗੀਆਂ ਹਨ:

1. ਧਾਤੂ
2. ਗ੍ਰਾਮ
3. ਪ੍ਰਥਮ
4. ਰੂਪਕਾਲਪਤੀ

**Options :**

485584134473. 1
485584134474. 2
485584134475. 3

**Question Number : 255 Question Id : 48558433620 Question Type : MCQ Option Shuffling : No Is Question Mandatory : No Calculator : None Response Time : N.A Think Time : N.A Minimum Instruction Time : 0**

**Correct Marks : 5 Wrong Marks : 1**

**Question Key Details :**

Key	Value
Comprehension	Comp1

Read the paragraph and answer the following questions:

Raga has been manifested through Anibaddha and Nibaddha. Anibaddha refers to free extempore development of a raga. In ancient period, it was done under the concept of Alapti. Alapti is of two types - Ragalapti and Rupkalapti. alapti is governed by Svasthana. there are four types of Svasthana known as Prathama, Dvitya, Tritiya and Chaturtha Svasthana. Rupkalapti is done in two steps, that is, Pratigrahanika and Bhanjani. Bhanjani can further be done in two ways which are Sthaya Bhanjani and Rupak Bhanjani.

The two types of Bhanjani are:

1. Sthaya and Rupak
2. Rupak and Prathama
3. Tritiya and Sthaya
4. Rupak and Chathurtha

**Options :**

485584134477. 1  
485584134478. 2  
485584134479. 3  
485584134480. 4

**Question Number : 255 Question Id : 48558433620 Question Type : MCQ Option Shuffling : No Is Question Mandatory : No Calculator : None Response Time : N.A Think Time : N.A Minimum Instruction Time : 0**

**Correct Marks : 5 Wrong Marks : 1**

**Question Key Details :**

Key	Value
Comprehension	Comp1

ਰਾਗ ਅਨਿਬਧ ਅਤੇ ਨਿਬਧ ਦੁਆਰਾ ਪ੍ਰਗਟ ਹੋਇਆ ਹੈ। ਅਨਿਬਧਾ ਇੱਕ ਰਾਗ ਦੇ ਸੁਤੰਤਰ ਵਿਕਾਸ ਨੂੰ ਦਰਸਾਉਂਦਾ ਹੈ। ਪ੍ਰਾਚੀਨ ਕਾਲ ਵਿੱਚ ਇਹ ਅਲਾਪਤੀ ਦੀ ਧਾਰਨਾ ਅਧੀਨ ਕੀਤਾ ਜਾਂਦਾ ਸੀ। ਅਲਾਪਤੀ ਦੇ ਕਿਸਮਾਂ ਦੀ ਹੁੰਦੀ ਹੈ- ਰਾਗਾਲਪਤੀ ਅਤੇ ਰੂਪਕਾਲਪਤੀ। ਅਲਾਪਤੀ ਦਾ ਸੰਚਾਲਨ ਸਵਾਸਥਾਨਾਂ ਦੁਆਰਾ ਕੀਤਾ ਜਾਂਦਾ ਹੈ। ਇਥੇ ਚਾਰ ਕਿਸਮਾਂ ਦੇ ਸਵਾਸਥਾਨ ਹਨ- ਪ੍ਰਥਮਾ, ਦ੍ਵਿਤੀਆ, ਤ੍ਰਿਤੀਆ ਅਤੇ ਚਤੁਰਥਾ ਸਵਾਸਥਾਨ। ਰੂਪਕਾਲਪਤੀ ਦੋ ਪੜਾਵਾਂ ਵਿੱਚ ਕੀਤੀ ਜਾਂਦੀ ਹੈ ਜੋ ਕਿ ਪ੍ਰਤੀਗ੍ਰਹਿਮਿਕਾ ਅਤੇ ਭੰਜਨੀ ਹਨ। ਭੰਜਨੀ ਨੂੰ ਹੋਰ ਦੋ ਤਰੀਕਿਆਂ ਨਾਲ ਕੀਤਾ ਜਾ ਸਕਦਾ ਹੈ। ਜੋ ਕਿ ਸਥਾਈ ਭੰਜਨੀ ਅਤੇ ਰੂਪਕ ਭੰਜਨੀ ਹਨ।

ਉੱਪਰ ਲਿਖੇ ਧੇਰੇ ਨੂੰ ਪੜ੍ਹਨ ਤੋਂ ਬਾਅਦ ਹੇਠਾਂ ਲਿਖੇ ਪ੍ਰਸ਼ਨਾਂ ਦੇ ਉੱਤਰ ਦਿਓ:

ਭੰਜਨੀ ਦੇ ਦੋ ਪ੍ਰਕਾਰ ਹਨ:

1. ਸਥਾਈ ਅਤੇ ਰੂਪਕ
2. ਰੂਪਕ ਅਤੇ ਪ੍ਰਥਮ
3. ਤ੍ਰਿਤਿਆ ਅਤੇ ਸਥਾਈ
4. ਰੂਪਕ ਅਤੇ ਚਤੁਰਥਾ

**Options :**

485584134477. 1  
485584134478. 2  
485584134479. 3  
485584134480. 4

**Sub-Section Number :**

2

**Sub-Section Id :**

4855842435

**Question Shuffling Allowed :**

No

**Is Section Default? :**

null

**Question Number : 256 Question Id : 48558433621 Question Type : MCQ Option Shuffling : No Is Question Mandatory : No Calculator : None Response Time : N.A Think Time : N.A Minimum Instruction Time : 0**

**Correct Marks : 5 Wrong Marks : 1**

**Question Key Details :**

Key	Value
Comprehension	Comp2

Read the paragraph and answer the following questions:

The Nobel recipient Rabindranath Tagore had a great place for Manipuri dance in his heart. He was attracted to the Manipuri dance form for its many features. In his poem "Chitrangada", which was later transformed into a dance drama, he takes the story to the land of Manipur. We have seen that Tagore was absorbed in padavali lyrics at a very tender age for the beautiful compositional and the descriptive aspect of the padavali poems. He wrote quite a few poems in Brajbuli like vaishnava lyrics in the pen name Bhanusingha which are a collection under the name of "Bhanusingher Padavali". These lyrics serve as a perfect accompaniment to Manipuri dances and often Bhanusingher Padavalis are performed as a dance drama in Manipuri dance style today.

What was the pen name of the author of 'Bhanusingher Padavali'?

1. Rabindranath Tagore
2. Bhanusingha
3. Chitrangada
4. Vaishnava

**Options :**

485584134481. 1  
485584134482. 2  
485584134483. 3  
485584134484. 4

Question Number : 256 Question Id : 48558433621 Question Type : MCQ Option Shuffling : No Is Question Mandatory : No Calculator : None Response Time : N.A Think Time : N.A Minimum Instruction Time : 0

Correct Marks : 5 Wrong Marks : 1

Question Key Details :

Key	Value
Comprehension	Comp2

ਪੈਰੇ ਨੂੰ ਧਿਆਨ ਨਾਲ ਪੜ੍ਹ ਕੇ ਹੇਠਾਂ ਦਿੱਤੇ ਪ੍ਰਸ਼ਨਾਂ ਦੇ ਉੱਤਰ ਦਿਓ:

ਨੋਬਲ ਇਨਾਮ ਪ੍ਰਾਪਤਕਰਤਾ ਰਵਿੰਦਰਨਾਥ ਟੈਗੋਰ ਦੇ ਦਿਲ ਵਿੱਚ ਮਨੀਪੁਰੀ ਨਾਚ ਲਈ ਬਹੁਤ ਵੱਡੀ ਥਾਂ ਸੀ। ਉਹ ਮਨੀਪੁਰੀ ਨਾਚ ਰੂਪ ਦੀਆਂ ਕਈ ਵਿਸ਼ੇਸ਼ਤਾਵਾਂ ਲਈ ਆਕਰਸ਼ਤ ਹੋਇਆ ਹੈ। ਆਪਣੀ ਕਵਿਤਾ 'ਚਿਤਰਾਂਗਦਾ' ਵਿੱਚ ਜਿਸਨੇ ਨਾਚ ਡਰਾਮੇ ਵਿੱਚ ਤਬਦੀਲ ਕੀਤਾ ਗਿਆ ਸੀ। ਉਹ ਕਹਾਣੀ ਨੂੰ ਮਨੀਪੁਰੀ ਦੀ ਧਰਤੀ ਤੇ ਲੈ ਜਾਂਦਾ ਹੈ। ਅਸੀਂ ਦੇਖਿਆ ਹੈ ਕਿ ਟੈਗੋਰ ਪਦਾਵਲੀ ਕਵਿਤਾਵਾਂ ਦੇ ਸੁੰਦਰ ਰਚਨਾਤਮਕ ਅਤੇ ਵਰਣਾਤਮਕ ਪਹਿਲੂ ਲਈ ਬਹੁਤ ਹੀ ਕੋਮਲ ਉਮਰ ਵਿੱਚ ਪਦਾਵਲੀ ਦੇ ਬੋਲਾਂ ਵਿੱਚ ਲੀਨ ਹੋ ਗਏ ਹਨ। ਉਸਨੇ ਬੁਜਬਲੀ ਵਿੱਚ ਬਹੁਤ ਸਾਰੀਆਂ ਕਵਿਤਾਵਾਂ ਲਿਖੀਆਂ ਜਿਵੇਂ ਕਿ ਭਾਨੁਸਿੰਘਰ ਪਦਾਵਲੀ ਦੇ ਨਾਮ ਹੇਠ ਇੱਕ ਸੰਗ੍ਰਹਿ ਹਨ। ਇਹ ਬੋਲੀ ਮਨੀਪੁਰੀ ਨਾਚ ਲਈ ਸੰਪੂਰਨ ਸੰਗੀਤ / ਸਾਥ ਦਿੰਦੇ ਹਨ ਅਤੇ ਅਜਕਲ ਮਨੀਪੁਰੀ ਨਾਚ ਸ਼ੈਲੀ ਵਿੱਚ ਭਾਨੁ ਗਾਇਦ ਪਦਾਵਲੀ ਨੂੰ ਇੱਕ ਨਿਊਟ ਨਾਟਕ ਵਜੋਂ ਪੇਸ਼ ਕੀਤਾ ਜਾਂਦਾ ਹੈ।

'ਭਾਨੁਸਿੰਘਰ ਪਦਾਵਲੀ' ਦੇ ਲੇਖਕ ਦਾ ਉਪਨਾਮ ਕੀ ਹੈ?

1. ਰਵਿੰਦਰ ਨਾਥ ਟੈਗੋਰ
2. ਭਾਨੁਸਿੰਘਾ
3. ਚਿਤਰਗੰਧਾ
4. ਵੈਸ਼ਨਵ

Options :

485584134481. 1  
485584134482. 2  
485584134483. 3  
485584134484. 4

Question Number : 257 Question Id : 48558433622 Question Type : MCQ Option Shuffling : No Is Question Mandatory : No Calculator : None Response Time : N.A Think Time : N.A Minimum Instruction Time : 0

Correct Marks : 5 Wrong Marks : 1

Question Key Details :

Key	Value
Comprehension	Comp2

Read the paragraph and answer the following questions:

The Nobel recipient Rabindranath Tagore had a great place for Manipuri dance in his heart. He was attracted to the Manipuri dance form for its many features. In his poem "Chitrangada", which was later transformed into a dance drama, he takes the story to the land of Manipur. We have seen that Tagore was absorbed in padavali lyrics at a very tender age for the beautiful compositional and the descriptive aspect of the padavali poems. He wrote quite a few poems in Brajbuli like vaishnava lyrics in the pen name Bhanusingha which are a collection under the name of "Bhanusingher Padavali". These lyrics serve as a perfect accompaniment to Manipuri dances and often Bhanusingher Padavalis are performed as a dance drama in Manipuri dance style today.

Who got the "Nobel Prize" for his book of poems "Geetanjali"?

1. Rabindranath Tagore
2. Abnindranath Tagore
3. Sachindranath Tagore
4. Brijendranath Tagore

Options :

485584134485. 1  
485584134486. 2  
485584134487. 3  
485584134488. 4

Question Number : 257 Question Id : 48558433622 Question Type : MCQ Option Shuffling : No Is Question Mandatory : No Calculator : None Response Time : N.A Think Time : N.A Minimum Instruction Time : 0

Correct Marks : 5 Wrong Marks : 1

Question Key Details :

Key	Value
Comprehension	Comp2

ਪੈਰੇ ਨੂੰ ਧਿਆਨ ਨਾਲ ਪੜ੍ਹ ਕੇ ਹੇਠਾਂ ਦਿੱਤੇ ਪ੍ਰਸ਼ਨਾਂ ਦੇ ਉੱਤਰ ਦਿਓ:

ਨੋਬਲ ਇਨਾਮ ਪ੍ਰਾਪਤਕਰਤਾ ਰਵਿੰਦਰਨਾਥ ਟੈਗੋਰ ਦੇ ਦਿਲ ਵਿੱਚ ਮਨੀਪੁਰੀ ਨਾਚ ਲਈ ਬਹੁਤ ਵੱਡੀ ਥਾਂ ਸੀ। ਉਹ ਮਨੀਪੁਰੀ ਨਾਚ ਰੂਪ ਦੀਆਂ ਕਈ ਵਿਸ਼ੇਸ਼ਤਾਵਾਂ ਲਈ ਆਕਰਸ਼ਤ ਹੋਇਆ ਹੈ। ਆਪਣੀ ਕਵਿਤਾ 'ਚਿਤਰਾਂਗਦਾ' ਵਿੱਚ ਸ਼ਿਸ਼ਨ ਨਾਚ ਡਰਾਮੇ ਵਿੱਚ ਤਬਦੀਲ ਕੀਤਾ ਗਿਆ ਸੀ। ਉਹ ਕਹਾਣੀ ਨੂੰ ਮਨੀਪੁਰੀ ਦੀ ਧਰਤੀ ਤੇ ਲੈ ਜਾਂਦਾ ਹੈ। ਅਸੀਂ ਦੇਖਿਆ ਹੈ ਕਿ ਟੈਗੋਰ ਪਦਾਵਲੀ ਕਵਿਤਾਵਾਂ ਦੇ ਸੁੰਦਰ ਰਚਨਾਤਮਕ ਅਤੇ ਵਰਣਾਤਮਕ ਪਹਿਲੂ ਲਈ ਬਹੁਤ ਹੀ ਕੋਮਲ ਉਮਰ ਵਿੱਚ ਪਦਾਵਲੀ ਦੇ ਬੋਲਾਂ ਵਿੱਚ ਲੀਨ ਹੋ ਗਏ ਹਨ। ਉਸਨੂੰ ਬੁਜਬਲੀ ਵਿੱਚ ਬਹੁਤ ਸਾਰੀਆਂ ਕਵਿਤਾਵਾਂ ਲਿਖੀਆਂ ਜਿਵੇਂ ਕਿ ਭਾਨੁਸਿੰਘਰ ਪਦਵਲੀ ਦੇ ਨਾਮ ਹੇਠ ਇੱਕ ਸਰਗੀ ਹਨ। ਇਹ ਬੋਲੀ ਮਨੀਪੁਰੀ ਨਾਚਾਂ ਲਈ ਸੰਪੂਰਨ ਸੰਗੀਤ / ਸਾਥ ਦਿੰਦੇ ਹਨ ਅਤੇ ਅਜਕਲ ਮਨੀਪੁਰੀ ਨਾਚ ਸ਼ੈਲੀ ਵਿੱਚ ਭਾਨੁ ਗਾਇਦ ਪਦਵਲੀ ਨੂੰ ਇੱਕ ਨਿੱਤ ਨਾਟਕ ਵਜੋਂ ਪੇਸ਼ ਕੀਤਾ ਜਾਂਦਾ ਹੈ।

ਕਿਸਨੂੰ ਆਪਣੀ ਕਾਵਿ ਪੁਸਤਕ " ਗੀਤਾਂਜਲੀ " ਲਈ " ਨੋਬਲ ਪੁਰਸਕਾਰ " ਮਿਲਿਆ?

1. ਰਵਿੰਦਰਨਾਥ ਟੈਗੋਰ
2. ਅਬਨਿੰਦਰਨਾਥ ਟੈਗੋਰ
3. ਸਚਿੰਦਰਨਾਥ ਟੈਗੋਰ
4. ਬ੍ਰਿਜੇਂਦਰਨਾਥ ਟੈਗੋਰ

Options :

485584134485. 1  
485584134486. 2  
485584134487. 3  
485584134488. 4

Question Number : 258 Question Id : 48558433623 Question Type : MCQ Option Shuffling : No Is Question Mandatory : No Calculator : None Response Time : N.A Think Time : N.A Minimum Instruction Time : 0

Correct Marks : 5 Wrong Marks : 1

Question Key Details :

Key	Value
-----	-------

Read the paragraph and answer the following questions:

The Nobel recipient Rabindranath Tagore had a great place for Manipuri dance in his heart. He was attracted to the Manipuri dance form for its many features. In his poem "Chitrangada", which was later transformed into a dance drama, he takes the story to the land of Manipur. We have seen that Tagore was absorbed in padavali lyrics at a very tender age for the beautiful compositional and the descriptive aspect of the padavali poems. He wrote quite a few poems in Brajbuli like vaishnava lyrics in the pen name Bhanusingha which are a collection under the name of "Bhanusingher Padavali". These lyrics serve as a perfect accompaniment to Manipuri dances and often Bhanusingher Padavalis are performed as a dance drama in Manipuri dance style today.

Which poem written by Tagore was later turned into a dance-drama in Manipuri dance?

1. Chandalika
2. Geetanjali
3. Sujata
4. Chitrangada

**Options :**

485584134489. 1  
485584134490. 2  
485584134491. 3  
485584134492. 4

**Question Number : 258 Question Id : 48558433623 Question Type : MCQ Option Shuffling : No Is Question Mandatory : No Calculator : None Response Time : N.A Think Time : N.A Minimum Instruction Time : 0**

**Correct Marks : 5 Wrong Marks : 1**

**Question Key Details :**

Key	Value
Comprehension	Comp2

ਪੈਰੋ ਨੂੰ ਧਿਆਨ ਨਾਲ ਪੜ੍ਹ ਕੇ ਹੇਠਾਂ ਦਿੱਤੇ ਪ੍ਰਸ਼ਨਾਂ ਦੇ ਉੱਤਰ ਦਿਓ:

ਨੋਬਲ ਇਨਾਮ ਪਾਪਤਕਰਤਾ ਰਵਿੰਦਰਨਾਥ ਟੈਗੋਰ ਦੇ ਦਿਲ ਵਿੱਚ ਮਨੀਪੁਰੀ ਨਾਚ ਲਈ ਬਹੁਤ ਵੱਡੀ ਥਾਂ ਸੀ। ਉਹ ਮਨੀਪੁਰੀ ਨਾਚ ਰੂਪ ਦੀਆਂ ਕਈ ਵਿਸ਼ੇਸ਼ਤਾਵਾਂ ਲਈ ਆਕਰਸ਼ਿਤ ਹੋਇਆ ਹੈ। ਆਪਣੀ ਕਵਿਤਾ 'ਚਿਤਰਾਂਗਦਾ' ਵਿੱਚ ਸ਼ਿਸ਼ਨ ਨਾਚ ਡਰਾਮੇ ਵਿੱਚ ਤਬਦੀਲ ਕੀਤਾ ਗਿਆ ਸੀ। ਉਹ ਕਹਾਣੀ ਨੂੰ ਮਨੀਪੁਰੀ ਦੀ ਧਰਤੀ ਤੇ ਲੈ ਜਾਂਦਾ ਹੈ। ਅਸੀਂ ਦੇਖਿਆ ਹੈ ਕਿ ਟੈਗੋਰ ਪਦਾਵਲੀ ਕਵਿਤਾਵਾਂ ਦੇ ਸੁੰਦਰ ਰਚਨਾਤਮਕ ਅਤੇ ਵਰਣਾਤਮਕ ਪਹਿਲੂ ਲਈ ਬਹੁਤ ਹੀ ਕੋਮਲ ਉਮਰ ਵਿੱਚ ਪਦਾਵਲੀ ਦੇ ਬੋਲਾਂ ਵਿੱਚ ਲੀਨ ਹੋ ਗਏ ਹਨ। ਉਸਨੇ ਬਜਬਲੀ ਵਿੱਚ ਬਹੁਤ ਸਾਰੀਆਂ ਕਵਿਤਾਵਾਂ ਲਿਖੀਆਂ ਜਿਵੇਂ ਕਿ ਭਾਨੁਸਿੰਘਰ ਪਦਵਲੀ ਦੇ ਨਾਮ ਹੇਠ ਇੱਕ ਸੰਗ੍ਰਹਿ ਹਨ। ਇਹ ਬੋਲੀ ਮਨੀਪੁਰੀ ਨਾਚ ਲਈ ਸੰਪੂਰਨ ਸੰਗੀਤ / ਸਾਥ ਦਿੰਦੇ ਹਨ ਅਤੇ ਅਜਕਲ ਮਨੀਪੁਰੀ ਨਾਚ ਸ਼ੈਲੀ ਵਿੱਚ ਭਾਨੁ ਗਾਇਦ ਪਦਵਲੀ ਨੂੰ ਇੱਕ ਨ੍ਰਿਤ ਨਾਟਕ ਵਜੋਂ ਪੇਸ਼ ਕੀਤਾ ਜਾਂਦਾ ਹੈ।

ਕਿਹੜੀ ਕਵਿਤਾ ਟੈਗੋਰ ਦੁਆਰਾ ਲਿਖੀ ਗਈ ਹੈ ਜੋ ਬਾਅਦ ਵਿੱਚ ' ਮਨੀਪੁਰ ਨਾਚ ' ਵਿੱਚ ਨਾਚ ਨਾਟਕ ਵਿੱਚ ਪਰਿਵਰਤਿਤ/ਰੂਪਾਂਤਰਿਤ ਹੋ ਗਈ?

1. ਚੰਦਲਿਕਾ
2. ਗੀਤਾਂਜਲੀ
3. ਸੁਜਾਤਾ
4. ਚਿਤਰਾਰੰਦਾ

**Options :**

485584134489. 1  
485584134490. 2  
485584134491. 3  
485584134492. 4

**Question Number : 259 Question Id : 48558433624 Question Type : MCQ Option Shuffling : No Is Question Mandatory : No Calculator : None Response Time : N.A Think Time : N.A Minimum Instruction Time : 0**

**Correct Marks : 5 Wrong Marks : 1**

**Question Key Details :**

Key	Value
Comprehension	Comp2

Read the paragraph and answer the following questions:

The Nobel recipient Rabindranath Tagore had a great place for Manipuri dance in his heart. He was attracted to the Manipuri dance form for its many features. In his poem "Chitrangada", which was later transformed into a dance drama, he takes the story to the land of Manipur. We have seen that Tagore was absorbed in padavali lyrics at a very tender age for the beautiful compositional and the descriptive aspect of the padavali poems. He wrote quite a few poems in Brajbuli like vaishnava lyrics in the pen name Bhanusingha which are a collection under the name of "Bhanusingher Padavali". These lyrics serve as a perfect accompaniment to Manipuri dances and often Bhanusingher Padavalis are performed as a dance drama in Manipuri dance style today.

Which classical dance form had a great place in the heart of Rabindranath Tagore?

1. Mohiniattam
2. Odissi
3. Manipuri
4. Sattriya

**Options :**

485584134493. 1  
485584134494. 2  
485584134495. 3  
485584134496. 4

**Question Number : 259 Question Id : 48558433624 Question Type : MCQ Option Shuffling : No Is Question Mandatory : No Calculator : None Response Time : N.A Think Time : N.A Minimum Instruction Time : 0**

Correct Marks : 5 Wrong Marks : 1

Question Key Details :

Key	Value
Comprehension	Comp2

ਪੈਰੇ ਨੂੰ ਧਿਆਨ ਨਾਲ ਪੜ੍ਹ ਕੇ ਹੇਠਾਂ ਦਿੱਤੇ ਪ੍ਰਸ਼ਨਾਂ ਦੇ ਉੱਤਰ ਦਿਓ:

ਨੋਬਲ ਇਨਾਮ ਪ੍ਰਾਪਤਕਰਤਾ ਰਵਿੰਦਰਨਾਥ ਟੈਗੋਰ ਦੇ ਦਿਲ ਵਿੱਚ ਮਨੀਪੁਰੀ ਨਾਚ ਲਈ ਬਹੁਤ ਵੱਡੀ ਥਾਂ ਸੀ। ਉਹ ਮਨੀਪੁਰੀ ਨਾਚ ਰੂਪ ਦੀਆਂ ਕਈ ਵਿਸ਼ੇਸ਼ਤਾਵਾਂ ਲਈ ਆਕਰਸ਼ਤ ਹੋਇਆ ਹੈ। ਆਪਣੀ ਕਵਿਤਾ 'ਚਿਤਰਾਂਗਦਾ' ਵਿੱਚ ਜਿਸਨੂੰ ਨਾਚ ਡਰਾਮੇ ਵਿੱਚ ਤਬਦੀਲ ਕੀਤਾ ਗਿਆ ਸੀ। ਉਹ ਕਹਾਣੀ ਨੂੰ ਮਨੀਪੁਰੀ ਦੀ ਧਰਤੀ ਤੇ ਲੈ ਜਾਂਦਾ ਹੈ। ਅਸੀਂ ਦੇਖਿਆ ਹੈ ਕਿ ਟੈਗੋਰ ਪਦਾਵਲੀ ਕਵਿਤਾਵਾਂ ਦੇ ਸੁੰਦਰ ਰਚਨਾਤਮਕ ਅਤੇ ਵਰਣਾਤਮਕ ਪ੍ਰਹਿਲ ਲਈ ਬਹੁਤ ਹੀ ਕੋਮਲ ਉਮਰ ਵਿੱਚ ਪਦਾਵਲੀ ਦੇ ਬੋਲਾਂ ਵਿੱਚ ਲੀਨ ਹੋ ਗਏ ਹਨ। ਉਸਨੂੰ ਬਜਬਲੀ ਵਿੱਚ ਬਹੁਤ ਸਾਰੀਆਂ ਕਵਿਤਾਵਾਂ ਲਿਖੀਆਂ ਜਿਵੇਂ ਕਿ ਭਾਨੁਸਿੰਘਰ ਪਦਵਲੀ ਦੇ ਨਾਮ ਹੇਠ ਇੱਕ ਸ਼ਰਾਹਿ ਹਨ। ਇਹ ਬੋਲੀ ਮਨੀਪੁਰੀ ਨਾਚਾਂ ਲਈ ਸੰਪੂਰਨ ਸ਼ਰਤਿ / ਸਾਥ ਦਿੰਦੇ ਹਨ ਅਤੇ ਅਜਕਲ ਮਨੀਪੁਰੀ ਨਾਚ ਸ਼ੈਲੀ ਵਿੱਚ ਭਾਨੂ ਗਾਇਦ ਪਦਵਲੀ ਨੂੰ ਇੱਕ ਨਿੱਤ ਨਾਟਕ ਵਜੋਂ ਪੇਸ਼ ਕੀਤਾ ਜਾਂਦਾ ਹੈ।

ਕਿਸ ਸ਼ਾਸਤਰੀ ਨਾਚ ਰੂਪ ਨੇ ਰਵਿੰਦਰਨਾਥ ਟੈਗੋਰ ਦੇ ਦਿਲ ਵਿੱਚ ਆਪਣੀ ਇੱਕ ਖਾਸ ਜਗ੍ਹਾ ਬਣਾ ਲਈ?

1. ਮੋਹਿਨੀਅੱਟਮ
2. ਉਡੀਸੀ
3. ਮਨੀਪੁਰੀ
4. ਸੱਤਰੀਆ

Options :

485584134493. 1

485584134494. 2

485584134495. 3

485584134496. 4

Question Number : 260 Question Id : 48558433625 Question Type : MCQ Option Shuffling : No Is Question Mandatory : No Calculator : None Response Time : N.A Think Time : N.A Minimum Instruction Time : 0

Correct Marks : 5 Wrong Marks : 1

Question Key Details :

Key	Value
Comprehension	Comp2

Read the paragraph and answer the following questions:

The Nobel recipient Rabindranath Tagore had a great place for Manipuri dance in his heart. He was attracted to the Manipuri dance form for its many features. In his poem "Chitrangada", which was later transformed into a dance drama, he takes the story to the land of Manipur. We have seen that Tagore was absorbed in padavali lyrics at a very tender age for the beautiful compositional and the descriptive aspect of the padavali poems. He wrote quite a few poems in Brajbuli like vaishnava lyrics in the pen name Bhanusingha which are a collection under the name of "Bhanusingher Padavali". These lyrics serve as a perfect accompaniment to Manipuri dances and often Bhanusingher Padavalis are performed as a dance drama in Manipuri dance style today.



"Bhanusingher Padavali" was written in which language?

1. Brajvalli
2. Bengali
3. Brajbuli
4. Pali

**Options :**

485584134497. 1  
485584134498. 2  
485584134499. 3  
485584134500. 4

**Question Number : 260 Question Id : 48558433625 Question Type : MCQ Option Shuffling : No Is Question Mandatory : No Calculator : None Response Time : N.A Think Time : N.A Minimum Instruction Time : 0**

**Correct Marks : 5 Wrong Marks : 1**

**Question Key Details :**

Key	Value
Comprehension	Comp2

ਪੈਰੇ ਨੂੰ ਧਿਆਨ ਨਾਲ ਪੜ੍ਹ ਕੇ ਹੇਠਾਂ ਦਿੱਤੇ ਪ੍ਰਸ਼ਨਾਂ ਦੇ ਉੱਤਰ ਦਿਓ:

ਨੋਬਲ ਇਨਾਮ ਪਾਪਤਕਰਤਾ ਰਵਿੰਦਰਨਾਥ ਟੈਗੋਰ ਦੇ ਦਿਲ ਵਿੱਚ ਮਨੀਪੁਰੀ ਨਾਚ ਲਈ ਬਹੁਤ ਵੱਡੀ ਥਾਂ ਸੀ। ਉਹ ਮਨੀਪੁਰੀ ਨਾਚ ਰੂਪ ਦੀਆਂ ਕਈ ਵਿਸ਼ੇਸ਼ਤਾਵਾਂ ਲਈ ਆਕਰਸ਼ਤ ਹੋਇਆ ਹੈ। ਆਪਣੀ ਕਵਿਤਾ 'ਚਿਤਰਾਂਗੁਦਾ' ਵਿੱਚ ਜਿਸਨੂੰ ਨਾਚ ਡਰਾਮੇ ਵਿੱਚ ਤਬਦੀਲ ਕੀਤਾ ਗਿਆ ਸੀ। ਉਹ ਕਹਾਣੀ ਨੂੰ ਮਨੀਪੁਰੀ ਦੀ ਧਰਤੀ ਤੋਂ ਲੈ ਜਾਂਦਾ ਹੈ। ਅਸੀਂ ਦੇਖਿਆ ਹੈ ਕਿ ਟੈਗੋਰ ਪਦਾਵਲੀ ਕਵਿਤਾਵਾਂ ਦੇ ਸੰਦਰੱਥ ਰਚਨਾਤਮਕ ਅਤੇ ਵਰਣਾਤਮਕ ਪਹਿਲੂ ਲਈ ਬਹੁਤ ਹੀ ਕੇਮਲ ਉਮਰ ਵਿੱਚ ਪਦਾਵਲੀ ਦੇ ਬੋਲਾਂ ਵਿੱਚ ਲੀਨ ਹੋ ਗਏ ਹਨ। ਉਸਨੂੰ ਬ੍ਰਜਬਲੀ ਵਿੱਚ ਬਹੁਤ ਸਾਰੀਆਂ ਕਵਿਤਾਵਾਂ ਲਿਖੀਆਂ ਜਿਵੇਂ ਕਿ ਭਾਨੂਸਿੰਘਰ ਪਦਵਲੀ ਦੇ ਨਾਮ ਹੇਠ ਇੱਕ ਸੰਗ੍ਰਹਿ ਹਨ। ਇਹ ਬੋਲੀ ਮਨੀਪੁਰੀ ਨਾਚਾਂ ਲਈ ਸੰਪੂਰਨ ਸੰਗੀਤ / ਸਾਥ ਦਿੰਦੇ ਹਨ ਅਤੇ ਅਜਕਲ ਮਨੀਪੁਰੀ ਨਾਚ ਸ਼ੈਲੀ ਵਿੱਚ ਭਾਨੂ ਗਾਇਦ ਪਦਵਲੀ ਨੂੰ ਇੱਕ ਨਿੱਤ ਨਾਟਕ ਵਜੋਂ ਪੇਸ਼ ਕੀਤਾ ਜਾਂਦਾ ਹੈ।

" ਭਾਨੂਸਿੰਘਰ ਪਦਾਵਲੀ " ਕਿਸ ਭਾਸ਼ਾ ਵਿੱਚ ਲਿਖੀ ਗਈ?

1. ਬ੍ਰਿਜਵਲੀ
2. ਬੰਗਾਲੀ
3. ਬ੍ਰਜਬੁਲੀ
4. ਪਾਲੀ

**Options :**

485584134497. 1  
485584134498. 2  
485584134499. 3  
485584134500. 4

**Sub-Section Number :**

3

**Sub-Section Id :**

4855842436

**Question Shuffling Allowed :**

No

**Is Section Default? :**

null

**Question Number : 261 Question Id : 48558433626 Question Type : MCQ Option Shuffling : No Is Question Mandatory : No Calculator : None Response Time : N.A Think Time : N.A Minimum Instruction Time : 0**

**Correct Marks : 5 Wrong Marks : 1**

**Question Key Details :**

Key	Value
Comprehension	Comp3

There is a great importance of laya in Indian Talas. Laya has been categorised basically into three types - Vilambit, Madhya and Druta. The rule of application in various forms of laya is called 'Yati'. Yati denotes application of 'gati'. Yati has been classified into five types, Sama, Strotogata, Gopuchha, Mridanga and Pipilika. In sama yati, the same laya is used throughout, that is beginning to end. In strotogata, initially we use slow (vilambit) laya whereas Madhya occurs in the middle and Drut laya comes at the end. When it comes to Gopuchha, exactly inverse order of layas is put to application vis a vis strotogata meaning thereby in the later Druta, Madhya laya and Vilambit laya occurs in the first, middle and last order. In Mridanga, drut laya is used at the outset as well as at the end and Madhya laya is used amidst thereof. In Pipilika, vilambit laya occurs in the beginning, at the end while madhya laya is used in middle order, hence 'Yati' is an important aspect of tala's Das Pranas.

Read the above passage and answer the following questions:

Which is the part of Ten pranas of Talas?

1. Chakradar
2. Uthan
3. Yati
4. Peshkar

**Options :**

- 485584134501. 1
- 485584134502. 2
- 485584134503. 3
- 485584134504. 4

**Question Number : 261 Question Id : 48558433626 Question Type : MCQ Option Shuffling : No Is Question Mandatory : No Calculator : None Response Time : N.A Think Time : N.A Minimum Instruction Time : 0**

**Correct Marks : 5 Wrong Marks : 1**

**Question Key Details :**

Key	Value
Comprehension	Comp3

ਸੰਗੀਤ ਨਾਟਕ ਅਕਾਦਮੀ (ਐਸ.ਐਨ.ਏ.)

ਸੰਗੀਤ ਕਲਾ ਅਕਾਦਮੀ ਦੀ ਸਥਾਪਨਾ 31 ਮਈ 1952 ਨੂੰ ਕੀਤੀ ਗਈ ਸੀ। 28 ਜੂਨਵਰੀ 1953 ਨੂੰ ਉਦਘਾਟਨ ਸਮੇਂ ਆਪਣੇ ਭਾਸ਼ਣ ਵਿੱਚ ਮੌਲਾਨਾ ਆਜ਼ਾਦ (1888-1958) ਨੇ ਉਸ ਸਮੇਂ ਦੇ ਕੇਂਦਰੀ ਸਿੱਖਿਆ ਮੰਤਰੀ ਅਤੇ ਬਾਅਦ ਵਿੱਚ ਸਭਿਆਚਾਰਕ ਸੰਬੰਧਾਂ ਲਈ ਭਾਰਤੀ ਕੌਂਸਲ ਦੇ ਸੰਸਥਾਪਕ ਨੇ ਕਿਹਾ ਕਿ ਐਸ ਐਨ ਏ ਦਾ ਉਦੇਸ਼ ਸਾਡੀਆਂ ਪਰੰਪਰਾਵਾਂ ਨੂੰ ਸੰਸਥਾਗਤ ਰੂਪ ਵਜੋਂ ਪੇਸ਼ ਕਰਕੇ ਉਨ੍ਹਾਂ ਨੂੰ ਸੁਰੱਖਿਅਤ ਰੱਖਣਾ ਸੀ।

ਐਸ ਐਨ ਏ ਦੀ ਮੰਗ ਨੂੰ ਇਸਦੇ ਮੈਮੋਰੈਂਡਮ ਆਫ਼ ਐਸੋਸੀਏਸ਼ਨ ਵਿੱਚ ਦੱਸਿਆ ਗਿਆ ਹੈ ਭਾਰਤੀ ਸੰਗੀਤ ਨਿਤ ਅਤੇ ਨਾਟਕ ਦੇ ਖੇਤਰਾਂ ਵਿੱਚ ਖੋਜ ਨੂੰ ਉਤਸ਼ਾਹਿਤ ਕਰਨ ਲਈ ਅਤੇ ਇਸ ਉਦੇਸ਼ ਲਈ ਇੱਕ ਲਾਇਬ੍ਰੇਰੀ ਅਤੇ ਇੱਕ ਅਜਾਇਬ ਘਰ ਦੀ ਸਥਾਪਨਾ ਕਰਨਾ ਅਤੇ ਖੋਜ ਨੂੰ ਪ੍ਰਕਾਸ਼ਿਤ ਕਰਨ ਲਈ ਸੰਗੀਤ ਨਾਚ ਅਤੇ ਨਾਟਕ ਦੀ ਕਲਾ ਦੇ ਸੰਬੰਧ ਵਿੱਚ ਵੱਖ-ਵੱਖ ਧਰਮਾਂ ਦੇ ਵਿਚਕਾਰ ਵਿਚਾਰਾਂ ਦੇ ਆਦਾਨ ਪ੍ਰਦਾਨ ਅਤੇ ਤਕਨੀਕ ਨੂੰ ਵਧਾਉਣ ਲਈ ਉਤਸ਼ਾਹਿਤ ਕਰਨਾ। ਵੱਖ-ਵੱਖ ਖੇਤਰਾਂ ਵਿੱਚ ਲੋਕ ਪਰੰਪਰਾਵਾਂ ਨੂੰ ਮੁੜ ਸੁਰਜੀਤ ਕਰਨ ਅਤੇ ਸੁਰੱਖਿਅਤ ਰੱਖਣ ਲਈ ਤਿਉਹਾਰਾਂ ਦੇ ਸੰਮੀਨਾਰ ਅਤੇ ਕਾਨਫਰੰਸਾਂ ਨੂੰ ਸਪੱਸ਼ਟ ਕਰਨ ਲਈ ਉਤਸ਼ਾਹਿਤ ਕਰਨ ਲਈ, ਵਿਅਕਤੀਗਤ ਕਲਾਕਾਰਾਂ ਨੂੰ ਸ਼ਾਨਦਾਰ ਪ੍ਰਾਪਤੀ ਦੀ ਮਾਨਤਾ ਦੇਣ ਲਈ, ਦੇਸ਼ ਦੇ ਵੱਖ-ਵੱਖ ਖੇਤਰਾਂ ਅਤੇ ਦੂਜੇ ਦੇਸ਼ਾਂ ਦੇ ਵਿਚਕਾਰ ਸਭਿਆਚਾਰਕ ਸੰਪਰਕ ਨੂੰ ਉਤਸ਼ਾਹਿਤ ਕਰਨਾ ਅਤੇ ਇਨ੍ਹਾਂ ਉਦੇਸ਼ਾਂ ਨੂੰ ਅੱਗੇ ਵਧਾਉਣ ਲਈ ਸਮਾਨ ਅਕਾਦਮੀ ਸੰਸਥਾਵਾਂ ਅਤੇ ਐਸੋਸੀਏਸ਼ਨਾਂ ਨਾਲ ਸਹਿਯੋਗ ਕਰਨਾ। ਬਿਏਟਰ ਦੇ ਸੰਬੰਧ ਵਿੱਚ ਐਸ.ਐਨ.ਏ. ਨੇ ਨਾਟਕਕਾਰਾਂ ਲਈ ਵਰਕਸ਼ਾਪਾਂ ਦਾ ਆਯੋਜਨ ਕੀਤਾ ਹੈ ਜੋ ਕਿ ਰਵਾਇਤੀ ਪ੍ਰਦਰਸ਼ਨ ਕਲਾ ਵਿੱਚ ਅੰਤਰਰਾਸ਼ੀ ਸਭਿਆਚਾਰ ਵਟਾਂਦਰਾ ਪ੍ਰੋਗਰਾਮ ਫੰਡ ਖੋਜ ਆਧੁਨਿਕ ਬਿਏਟਰ ਦੇ ਰਵਾਇਤੀ ਪ੍ਰਦਰਸ਼ਨ, ਸੈਡੇ ਬਿਏਟਰ ਮਰਿਉਨਬ ਬਿਏਟਰ ਅਤੇ ਹੋਰ ਰੂਪਾਂ ਦੇ ਸਭਿਆਚਾਰਕ ਸੰਸਥਾਵਾਂ ਸੰਗੀਠਨ ਤਿਉਹਾਰਾਂ ਨੂੰ ਵਿੱਤੀ ਸਹਾਇਤਾ ਪ੍ਰਦਾਨ ਕਰਦਾ ਹੈ। ਕਨਪੁਤਲੀ ਦੇ ਹੋਰ ਰੂਪ ਵਿਲੱਖਣ ਕਲਾਕਾਰ ਨੂੰ ਇਨਾਮ ਅਤੇ ਫੈਲੋਸ਼ਿਪ ਦਿੰਦੇ ਹਨ। ਆਡੀਓ ਟੇਪਾਂ ਦੇ ਵੀਡੀਓ ਅਤੇ ਫੋਟੋਆਂ ਨੂੰ ਇਕੱਠਾ ਕਰਦੇ ਹਨ ਅਤੇ ਇੱਕ ਆਡੀਓ ਵਿਜ਼ੁਅਲ ਅਵਿਲੇਖਾਕਾਰ ਦੇ ਨਾਲ ਨਾਲ ਇੱਕ ਲਾਇਬ੍ਰੇਰੀ ਦਾ ਪ੍ਰਬੰਧਨ ਕਰਦੇ ਹਨ।

ਉੱਪਰ ਲਿਖੇ ਪੈਰੇ ਨੂੰ ਪੜ੍ਹਨ ਤੋਂ ਬਾਅਦ ਹੇਠਾਂ ਲਿਖੇ ਪ੍ਰਸ਼ਨਾਂ ਦੇ ਉੱਤਰ ਦਿਓ:

ਤਾਲ ਦੇ ਦਸ ਪ੍ਰਾਣਾਂ ਦਾ ਹਿੱਸਾ ਕਿਹੜਾ ਹੈ?

1. ਚੱਕਰਦਾਰ
2. ਉਥਾਨ
3. ਯਤੀ
4. ਪੇਸ਼ਾਕਾਰ

**Options :**

485584134501. 1  
485584134502. 2  
485584134503. 3  
485584134504. 4

**Question Number : 262 Question Id : 48558433627 Question Type : MCQ Option Shuffling : No Is Question Mandatory : No Calculator : None Response Time : N.A Think Time : N.A Minimum Instruction Time : 0**

**Correct Marks : 5 Wrong Marks : 1**

**Question Key Details :**

Key	Value
Comprehension	Comp3

There is a great importance of laya in Indian Talas. Laya has been categorised basically into three types - Vilambit, Madhya and Druta. The rule of application in various forms of laya is called 'Yati'. Yati denotes application of 'gati'. Yati has been classified into five types, Sama, Strotogata, Gopuchha, Mridanga and Pipilika. In sama yati, the same laya is used throughout, that is beginning to end. In strotogata, initially we use slow (vilambit) laya whereas Madhya occurs in the middle and Drut laya comes at the end. When it comes to Gopuchha, exactly inverse order of layas is put to application vis a vis strotogata meaning thereby in the later Druta, Madhya laya and Vilambit laya occurs in the first, middle and last order. In Mridanga, drut laya is used at the outset as well as at the end and Madhya laya is used amidst thereof. In Pipilika, vilambit laya occurs in the beginning, at the end while madhya laya is used in middle order, hence 'Yati' is an important aspect of tala's Das Pranas.

Read the above passage and answer the following questions:

How many types of Yati are there?

1. 3
2. 5
3. 6
4. 8

**Options :**

485584134505. 1  
 485584134506. 2  
 485584134507. 3  
 485584134508. 4

**Question Number : 262 Question Id : 48558433627 Question Type : MCQ Option Shuffling : No Is Question Mandatory : No Calculator : None Response Time : N.A Think Time : N.A Minimum Instruction Time : 0**

**Correct Marks : 5 Wrong Marks : 1**

**Question Key Details :**

Key	Value
Comprehension	Comp3

ਸੰਗੀਤ ਨਾਟਕ ਅਕਾਦਮੀ (ਐਸ.ਐਨ.ਏ.)

ਸੰਗੀਤ ਕਲਾ ਅਕਾਦਮੀ ਦੀ ਸਥਾਪਨਾ 31 ਮਈ 1952 ਨੂੰ ਕੀਤੀ ਗਈ ਸੀ। 28 ਜੁਨਵਰੀ 1953 ਨੂੰ ਉਦਘਾਟਨ ਸਮੇਂ ਆਪਣੇ ਭਾਸ਼ਣ ਵਿੱਚ ਮੌਲਾਨਾ ਆਜ਼ਾਦ (1888-1958) ਨੇ ਉਸ ਸਮੇਂ ਦੇ ਕੇਂਦਰੀ ਸਿੱਖਿਆ ਮੰਤਰੀ ਅਤੇ ਬਾਅਦ ਵਿੱਚ ਸਭਿਆਚਾਰਕ ਸੰਬੰਧਾਂ ਲਈ ਭਾਰਤੀ ਕੌਂਸਲ ਦੇ ਸੰਸਥਾਪਕ ਨੇ ਕਿਹਾ ਕਿ ਐਸ ਐਨ ਏ ਦਾ ਉਦੇਸ਼ ਸਾਡੀਆਂ ਪਰੰਪਰਾਵਾਂ ਨੂੰ ਸੰਸਥਾਗਤ ਰੂਪ ਵਜੋਂ ਪੇਸ਼ ਕਰਕੇ ਉਨ੍ਹਾਂ ਨੂੰ ਸੁਰੱਖਿਅਤ ਰੱਖਣਾ ਸੀ।

ਐਸ ਐਨ ਏ ਦੀ ਮੰਗ ਨੂੰ ਇਸਦੇ ਮੈਮਬਰਡਮ ਆਫ਼ ਐਸੋਸੀਏਸ਼ਨ ਵਿੱਚ ਦੱਸਿਆ ਗਿਆ ਹੈ ਭਾਰਤੀ ਸੰਗੀਤ ਨਿਤ ਅਤੇ ਨਾਟਕ ਦੇ ਖੇਤਰਾਂ ਵਿੱਚ ਖੋਜ ਨੂੰ ਉਤਸ਼ਾਹਿਤ ਕਰਨ ਲਈ ਅਤੇ ਇਸ ਉਦੇਸ਼ ਲਈ ਇੱਕ ਲਾਇਬ੍ਰੇਰੀ ਅਤੇ ਇੱਕ ਅਜਾਇਬ ਘਰ ਦੀ ਸਥਾਪਨਾ ਕਰਨਾ ਅਤੇ ਖੋਜ ਨੂੰ ਪ੍ਰਕਾਸ਼ਿਤ ਕਰਨ ਲਈ ਸੰਗੀਤ ਨਾਚ ਅਤੇ ਨਾਟਕ ਦੀ ਕਲਾ ਦੇ ਸੰਬੰਧ ਵਿੱਚ ਵੱਖ-ਵੱਖ ਧਰਮਾਂ ਦੇ ਵਿਚਕਾਰ ਵਿਚਾਰਾਂ ਦੇ ਆਦਾਨ ਪ੍ਰਦਾਨ ਅਤੇ ਤਕਨੀਕ ਨੂੰ ਵਧਾਉਣ ਲਈ ਉਤਸ਼ਾਹਿਤ ਕਰਨਾ, ਵੱਖ-ਵੱਖ ਖੇਤਰਾਂ ਵਿੱਚ ਲੋਕ ਪਰੰਪਰਾਵਾਂ ਨੂੰ ਮੁੜ ਸੁਰਜੀਤ ਕਰਨ ਅਤੇ ਸੁਰੱਖਿਅਤ ਰੱਖਣ ਲਈ ਤਿਉਹਾਰਾਂ ਦੇ ਸਮੀਨਾਰ ਅਤੇ ਕਾਨਫਰੰਸਾਂ ਨੂੰ ਸਪੱਸ਼ਟ ਕਰਨ ਲਈ ਉਤਸ਼ਾਹਿਤ ਕਰਨ ਲਈ, ਵਿਅਕਤੀਗਤ ਕਲਾਕਾਰਾਂ ਨੂੰ ਸ਼ਾਨਦਾਰ ਪ੍ਰਾਪਤੀ ਦੀ ਮਾਨਤਾ ਦੇਣ ਲਈ, ਦੇਸ਼ ਦੇ ਵੱਖ-ਵੱਖ ਖੇਤਰਾਂ ਅਤੇ ਦੇਸ਼ਾਂ ਦੇ ਵਿਚਕਾਰ ਸਭਿਆਚਾਰਕ ਸੰਪਰਕ ਨੂੰ ਉਤਸ਼ਾਹਿਤ ਕਰਨਾ ਅਤੇ ਇਨ੍ਹਾਂ ਉਦੇਸ਼ਾਂ ਨੂੰ ਅੱਗੇ ਵਧਾਉਣ ਲਈ ਸਮਾਨ ਅਕਾਦਮੀ ਸੰਸਥਾਵਾਂ ਅਤੇ ਐਸੋਸੀਏਸ਼ਨਾਂ ਨਾਲ ਸਹਿਯੋਗ ਕਰਨਾ। ਥਿਏਟਰ ਦੇ ਸੰਬੰਧ ਵਿੱਚ ਐਸ.ਐਨ.ਏ. ਨੇ ਨਾਟਕਕਾਰਾਂ ਲਈ ਵਰਕਸ਼ਾਪਾਂ ਦਾ ਆਯੋਜਨ ਕੀਤਾ ਹੈ ਜੋ ਕਿ ਰਵਾਇਤੀ ਪ੍ਰਦਰਸ਼ਨ ਕਲਾ ਵਿੱਚ ਅੰਤਰਰਾਸ਼ੀ ਸਭਿਆਚਾਰ ਵਟਾਂਦਰਾ ਪ੍ਰੋਗਰਾਮ ਫੰਡ ਖੋਜ ਆਧੁਨਿਕ ਥਿਏਟਰ ਦੇ ਰਵਾਇਤੀ ਪ੍ਰਦਰਸ਼ਨ, ਸੈਡੇ ਥਿਏਟਰ ਮਰਿਉਨਿਥ ਥਿਏਟਰ ਅਤੇ ਹੋਰ ਰੂਪਾਂ ਦੇ ਸਭਿਆਚਾਰਕ ਸੰਸਥਾਵਾਂ ਸੰਗੀਤਨ ਤਿਉਹਾਰਾਂ ਨੂੰ ਵਿੱਤੀ ਸਹਾਇਤਾ ਪ੍ਰਦਾਨ ਕਰਦਾ ਹੈ। ਕਨਪੁਤਲੀ ਦੇ ਹੋਰ ਰੂਪ ਵਿਲੱਖਣ ਕਲਾਕਾਰ ਨੂੰ ਇਨਾਮ ਅਤੇ ਫੈਲੋਸ਼ਿਪ ਦਿੰਦੇ ਹਨ। ਆਡੀਓ ਟੇਪਾਂ ਦੇ ਵੀਡੀਓ ਅਤੇ ਫੋਟੋਆਂ ਨੂੰ ਇਕੱਠਾ ਕਰਦੇ ਹਨ ਅਤੇ ਇੱਕ ਆਡੀਓ ਵਿਜ਼ੁਅਲ ਅਵਿਲੇਖਾਕਾਰ ਦੇ ਨਾਲ ਨਾਲ ਇੱਕ ਲਾਇਬ੍ਰੇਰੀ ਦਾ ਪ੍ਰਬੰਧਨ ਕਰਦੇ ਹਨ।

ਉੱਪਰ ਲਿਖੇ ਪੈਰ੍ਹੇ ਨੂੰ ਪੜ੍ਹਨ ਤੋਂ ਬਾਅਦ ਹੇਠਾਂ ਲਿਖੇ ਪ੍ਰਸ਼ਨਾਂ ਦੇ ਉੱਤਰ ਦਿਓ:

ਯਤੀ ਦੀਆਂ ਇੱਥੇ ਕਿੰਨੀਆਂ ਕਿਸਮਾਂ ਹਨ?

1. 3
2. 5
3. 6
4. 8

**Options :**

485584134505. 1  
485584134506. 2  
485584134507. 3  
485584134508. 4

**Question Number : 263 Question Id : 48558433628 Question Type : MCQ Option Shuffling : No Is Question Mandatory : No Calculator : None Response Time : N.A Think Time : N.A Minimum Instruction Time : 0**

**Correct Marks : 5 Wrong Marks : 1**

**Question Key Details :**

Key	Value
Comprehension	Comp3

There is a great importance of laya in Indian Talas. Laya has been categorised basically into three types - Vilambit, Madhya and Druta. The rule of application in various forms of laya is called 'Yati'. Yati denotes application of 'gati'. Yati has been classified into five types, Sama, Strotogata, Gopuchha, Mridanga and Pipilika. In sama yati, the same laya is used throughout, that is beginning to end. In strotogata, initially we use slow (vilambit) laya whereas Madhya occurs in the middle and Drut laya comes at the end. When it comes to Gopuchha, exactly inverse order of layas is put to application vis a vis strotogata meaning thereby in the later Druta, Madhya laya and Vilambit laya occurs in the first, middle and last order. In Mridanga, drut laya is used at the outset as well as at the end and Madhya laya is used amidst thereof. In Pipilika, vilambit laya occurs in the beginning, at the end while madhya laya is used in middle order, hence 'Yati' is an important aspect of tala's Das Pranas.

Read the above passage and answer the following questions:

Application of laya in Sama yati is:

1. Drut, Madhya, Drut
2. Madhya, Drut, Madhya
3. Same laya from beginning to end
4. Drut laya at the beginning and end, and vilambit laya in the middle

**Options :**

485584134509. 1  
485584134510. 2  
485584134511. 3  
485584134512. 4

Question Number : 263 Question Id : 48558433628 Question Type : MCQ Option Shuffling : No Is Question Mandatory : No Calculator : None Response Time : N.A Think Time : N.A Minimum Instruction Time : 0

Correct Marks : 5 Wrong Marks : 1

Question Key Details :

Key	Value
Comprehension	Comp3

ਸੰਗੀਤ ਨਾਟਕ ਅਕਾਦਮੀ (ਐਸ.ਐਨ.ਏ.)

ਸੰਗੀਤ ਕਲਾ ਅਕਾਦਮੀ ਦੀ ਸਥਾਪਨਾ 31 ਮਈ 1952 ਨੂੰ ਕੀਤੀ ਗਈ ਸੀ। 28 ਜੁਨਵਰੀ 1953 ਨੂੰ ਉਦਘਾਟਨ ਸਮੇਂ ਆਪਣੇ ਭਾਸ਼ਣ ਵਿੱਚ ਮੌਲਾਨਾ ਆਜ਼ਾਦ (1888-1958) ਨੇ ਉਸ ਸਮੇਂ ਦੇ ਕੇਂਦਰੀ ਸਿੱਖਿਆ ਮੰਤਰੀ ਅਤੇ ਬਾਅਦ ਵਿੱਚ ਸਭਿਆਚਾਰਕ ਸੰਬੰਧਾਂ ਲਈ ਭਾਰਤੀ ਕੌਮਲ ਦੇ ਸੰਸਥਾਪਕ ਨੇ ਕਿਹਾ ਕਿ ਐਸ ਐਨ ਏ ਦਾ ਉਦੇਸ਼ ਸਾਡੀਆਂ ਪਰੰਪਰਾਵਾਂ ਨੂੰ ਸੰਸਥਾਗਤ ਰੂਪ ਵਜੋਂ ਪੇਸ਼ ਕਰਕੇ ਉਨ੍ਹਾਂ ਨੂੰ ਸੁਰੱਖਿਅਤ ਰੱਖਣਾ ਸੀ।

ਐਸ ਐਨ ਏ ਦੀ ਮੰਗ ਨੂੰ ਇਸਦੇ ਮੈਮੋਰੈਂਡਮ ਆਫ਼ ਐਸੋਸੀਏਸ਼ਨ ਵਿੱਚ ਦੱਸਿਆ ਗਿਆ ਹੈ ਭਾਰਤੀ ਸੰਗੀਤ ਨਿਤ ਅਤੇ ਨਾਟਕ ਦੇ ਖੇਤਰਾਂ ਵਿੱਚ ਖੋਜ ਨੂੰ ਉਤਸ਼ਾਹਿਤ ਕਰਨ ਲਈ ਅਤੇ ਇਸ ਉਦੇਸ਼ ਲਈ ਇੱਕ ਲਾਇਬ੍ਰੇਰੀ ਅਤੇ ਇੱਕ ਅਜਾਇਬ ਘਰ ਦੀ ਸਥਾਪਨਾ ਕਰਨਾ ਅਤੇ ਖੋਜ ਨੂੰ ਪ੍ਰਕਾਸ਼ਿਤ ਕਰਨ ਲਈ ਸੰਗੀਤ ਨਾਚ ਅਤੇ ਨਾਟਕ ਦੀ ਕਲਾ ਦੇ ਸੰਬੰਧ ਵਿੱਚ ਵੱਖ-ਵੱਖ ਧਰਮਾਂ ਦੇ ਵਿਚਕਾਰ ਵਿਚਾਰਾਂ ਦੇ ਆਦਾਨ ਪ੍ਰਦਾਨ ਅਤੇ ਤਕਨੀਕ ਨੂੰ ਵਧਾਉਣ ਲਈ ਉਤਸ਼ਾਹਿਤ ਕਰਨਾ। ਵੱਖ-ਵੱਖ ਖੇਤਰਾਂ ਵਿੱਚ ਲੋਕ ਪਰੰਪਰਾਵਾਂ ਨੂੰ ਮੁੜ ਸੁਰਜੀਤ ਕਰਨ ਅਤੇ ਸੁਰੱਖਿਅਤ ਰੱਖਣ ਲਈ ਤਿਉਹਾਰਾਂ ਦੇ ਸੰਮੀਨਾਰ ਅਤੇ ਕਾਨਫਰੰਸਾਂ ਨੂੰ ਸੰਪੱਰਕ ਕਰਨ ਲਈ ਉਤਸ਼ਾਹਿਤ ਕਰਨ ਲਈ, ਵਿਅਕਤੀਗਤ ਕਲਾਕਾਰਾਂ ਨੂੰ ਸ਼ਾਨਦਾਰ ਪ੍ਰਾਪਤੀ ਦੀ ਮਾਨਤਾ ਦੇਣ ਲਈ, ਦੇਸ਼ ਦੇ ਵੱਖ-ਵੱਖ ਖੇਤਰਾਂ ਅਤੇ ਦੂਜੇ ਦੇਸ਼ਾਂ ਦੇ ਵਿਚਕਾਰ ਸਭਿਆਚਾਰਕ ਸੰਪਰਕ ਨੂੰ ਉਤਸ਼ਾਹਿਤ ਕਰਨਾ ਅਤੇ ਇਨ੍ਹਾਂ ਉਦੇਸ਼ਾਂ ਨੂੰ ਅੱਗੇ ਵਧਾਉਣ ਲਈ ਸਮਾਨ ਅਕਾਦਮੀ ਸੰਸਥਾਵਾਂ ਅਤੇ ਐਸੋਸੀਏਸ਼ਨਾਂ ਨਾਲ ਸਹਿਯੋਗ ਕਰਨਾ। ਥਿਏਟਰ ਦੇ ਸੰਬੰਧ ਵਿੱਚ ਐਸ.ਐਨ.ਏ. ਨੇ ਨਾਟਕਕਾਰਾਂ ਲਈ ਵਰਕਸ਼ਾਪਾਂ ਦਾ ਆਯੋਜਨ ਕੀਤਾ ਹੈ ਜੋ ਕਿ ਰਵਾਇਤੀ ਪ੍ਰਦਰਸ਼ਨ ਕਲਾ ਵਿੱਚ ਅੰਤਰਰਾਸ਼ੀ ਸਭਿਆਚਾਰ ਵਟਾਂਦਰਾ ਪ੍ਰੋਗਰਾਮ ਫੰਡ ਖੋਜ ਆਧੁਨਿਕ ਥਿਏਟਰ ਦੇ ਰਵਾਇਤੀ ਪ੍ਰਦਰਸ਼ਨ, ਸੈਡੇ ਥਿਏਟਰ ਮਰਿਊਨਥ ਥਿਏਟਰ ਅਤੇ ਹੋਰ ਰੂਪਾਂ ਦੇ ਸਭਿਆਚਾਰਕ ਸੰਸਥਾਵਾਂ ਸੰਗੀਤ ਨਿਤ ਤਿਉਹਾਰਾਂ ਨੂੰ ਵਿੱਤੀ ਸਹਾਇਤਾ ਪ੍ਰਦਾਨ ਕਰਦਾ ਹੈ। ਕਨਪੁਤਲੀ ਦੇ ਹੋਰ ਰੂਪ ਵਿਲੱਖਣ ਕਲਾਕਾਰ ਨੂੰ ਇਨਾਮ ਅਤੇ ਫੈਲੋਸ਼ਿਪ ਦਿੰਦੇ ਹਨ। ਆਡੀਓ ਟੇਪਾਂ ਦੇ ਵੀਡੀਓ ਅਤੇ ਫੋਟੋਆਂ ਨੂੰ ਇਕੱਠਾ ਕਰਦੇ ਹਨ ਅਤੇ ਇੱਕ ਆਡੀਓ ਵਿਜ਼ੁਅਲ ਅਵਿਲੇਖਾਕਾਰ ਦੇ ਨਾਲ ਨਾਲ ਇੱਕ ਲਾਇਬ੍ਰੇਰੀ ਦਾ ਪ੍ਰਬੰਧਨ ਕਰਦੇ ਹਨ।

ਉੱਪਰ ਲਿਖੇ ਪੈਰ੍ਹੇ ਨੂੰ ਪੜ੍ਹਨ ਤੋਂ ਬਾਅਦ ਹੇਠਾਂ ਲਿਖੇ ਪ੍ਰਸ਼ਨਾਂ ਦੇ ਉੱਤਰ ਦਿਓ:

ਸਮਝਤੀ ਵਿੱਚ ਲੈਅ ਦਾ ਉਪਯੋਗ/ਵਰਤੋਂ ਹੈ:

1. ਦਰੁਤ, ਮਧਿਆ, ਦਰੁਤ
2. ਮਧਿਆ, ਦਰੁਤ, ਮਧਿਆ
3. ਸ਼ੁਰੂ ਤਨ ਅੰਤ ਤੱਕ ਇੱਕੋ ਲੈਅ
4. ਦਰੁਤ ਲੈਅ ਸ਼ੁਰੂ ਤੋਂ ਅੰਤ ਵਿੱਚ ਅਤੇ ਵਿਲੰਬਿਤ ਲੈਅ ਮੱਧ ਵਿੱਚ

Options :

485584134509. 1  
485584134510. 2  
485584134511. 3  
485584134512. 4

Question Number : 264 Question Id : 48558433629 Question Type : MCQ Option Shuffling : No Is Question Mandatory : No Calculator : None Response Time : N.A Think Time : N.A Minimum Instruction Time : 0

Correct Marks : 5 Wrong Marks : 1

Question Key Details :

Key	Value
Comprehension	Comp3

There is a great importance of laya in Indian Talas. Laya has been categorised basically into three types - Vilambit, Madhya and Druta. The rule of application in various forms of laya is called 'Yati'. Yati denotes application of 'gati'. Yati has been classified into five types, Sama, Strotogata, Gopuchha, Mridanga and Pipilika. In sama yati, the same laya is used throughout, that is beginning to end. In strotogata, initially we use slow (vilambit) laya whereas Madhya occurs in the middle and Drut laya comes at the end. When it comes to Gopuchha, exactly inverse order of layas is put to application vis a vis strotogata meaning thereby in the later Druta, Madhya laya and Vilambit laya occurs in the first, middle and last order. In Mridanga, drut laya is used at the outset as well as at the end and Madhya laya is used amidst thereof. In Pipilika, vilambit laya occurs in the beginning, at the end while madhya laya is used in middle order, hence 'Yati' is an important aspect of tala's Das Pranas.

Read the above passage and answer the following questions:

Drut in the beginning and end, and Madhya laya in the middle is:

1. Sama
2. Pipilika
3. Gopuccha
4. Mridanga

**Options :**

485584134513. 1  
 485584134514. 2  
 485584134515. 3  
 485584134516. 4

**Question Number : 264 Question Id : 48558433629 Question Type : MCQ Option Shuffling : No Is Question Mandatory : No Calculator : None Response Time : N.A Think Time : N.A Minimum Instruction Time : 0**

**Correct Marks : 5 Wrong Marks : 1**

**Question Key Details :**

Key	Value
Comprehension	Comp3

ਸੰਗੀਤ ਨਾਟਕ ਅਕਾਦਮੀ (ਐਸ.ਐਨ.ਏ.)

ਸੰਗੀਤ ਕਲਾ ਅਕਾਦਮੀ ਦੀ ਸਥਾਪਨਾ 31 ਮਈ 1952 ਨੂੰ ਕੀਤੀ ਗਈ ਸੀ। 28 ਜਨਵਰੀ 1953 ਨੂੰ ਉਦਘਾਟਨ ਸਮੇਂ ਆਪਣੇ ਭਾਸ਼ਣ ਵਿੱਚ ਮੌਲਾਨਾ ਆਜ਼ਾਦ (1888-1958) ਨੇ ਉਸ ਸਮੇਂ ਦੇ ਕੇਂਦਰੀ ਸਿੱਖਿਆ ਮੰਤਰੀ ਅਤੇ ਬਾਅਦ ਵਿੱਚ ਸਭਿਆਚਾਰਕ ਸੰਬੰਧਾਂ ਲਈ ਭਾਰਤੀ ਕੌਮਲ ਦੇ ਸੰਸਥਾਪਕ ਨੇ ਕਿਹਾ ਕਿ ਐਸ ਐਨ ਏ ਦਾ ਉਦੇਸ਼ ਸਾਡੀਆਂ ਪਰੰਪਰਾਵਾਂ ਨੂੰ ਸੰਸਥਾਗਤ ਰੂਪ ਵਜੋਂ ਪੇਸ਼ ਕਰਕੇ ਉਨ੍ਹਾਂ ਨੂੰ ਸੁਰੱਖਿਅਤ ਰੱਖਣਾ ਸੀ।

ਐਸ ਐਨ ਏ ਦੀ ਮੰਗ ਨੂੰ ਇਸਦੇ ਮੈਮਬਰਡਮ ਆਫ਼ ਐਸੋਸੀਏਸ਼ਨ ਵਿੱਚ ਦੱਸਿਆ ਗਿਆ ਹੈ ਭਾਰਤੀ ਸੰਗੀਤ ਨਿਤ ਅਤੇ ਨਾਟਕ ਦੇ ਖੇਤਰਾਂ ਵਿੱਚ ਖੋਜ ਨੂੰ ਉਤਸ਼ਾਹਿਤ ਕਰਨ ਲਈ ਅਤੇ ਇਸ ਉਦੇਸ਼ ਲਈ ਇੱਕ ਲਾਇਬ੍ਰੇਰੀ ਅਤੇ ਇੱਕ ਅਜਾਇਬ ਘਰ ਦੀ ਸਥਾਪਨਾ ਕਰਨਾ ਅਤੇ ਖੋਜ ਨੂੰ ਪ੍ਰਕਾਸ਼ਿਤ ਕਰਨ ਲਈ ਸੰਗੀਤ ਨਾਚ ਅਤੇ ਨਾਟਕ ਦੀ ਕਲਾ ਦੇ ਸੰਬੰਧ ਵਿੱਚ ਵੱਖ-ਵੱਖ ਧਰਮਾਂ ਦੇ ਵਿਚਕਾਰ ਵਿਚਾਰਾਂ ਦੇ ਆਦਾਨ ਪ੍ਰਦਾਨ ਅਤੇ ਤਕਨੀਕ ਨੂੰ ਵਧਾਉਣ ਲਈ ਉਤਸ਼ਾਹਿਤ ਕਰਨਾ, ਵੱਖ-ਵੱਖ ਖੇਤਰਾਂ ਵਿੱਚ ਲੋਕ ਪਰੰਪਰਾਵਾਂ ਨੂੰ ਮੁੜ ਸੁਰਜੀਤ ਕਰਨ ਅਤੇ ਸੁਰੱਖਿਅਤ ਰੱਖਣ ਲਈ ਤਿਉਹਾਰਾਂ ਦੇ ਸਮੀਨਾਰ ਅਤੇ ਕਾਨਫਰੰਸਾਂ ਨੂੰ ਸੰਪੱਰਕ ਕਰਨ ਲਈ ਉਤਸ਼ਾਹਿਤ ਕਰਨ ਲਈ, ਵਿਅਕਤੀਗਤ ਕਲਾਕਾਰਾਂ ਨੂੰ ਸ਼ਾਨਦਾਰ ਪ੍ਰਾਪਤੀ ਦੀ ਮਾਨਤਾ ਦੇਣ ਲਈ, ਦੇਸ਼ ਦੇ ਵੱਖ-ਵੱਖ ਖੇਤਰਾਂ ਅਤੇ ਦੂਜੇ ਦੇਸ਼ਾਂ ਦੇ ਵਿਚਕਾਰ ਸਭਿਆਚਾਰਕ ਸੰਪਰਕ ਨੂੰ ਉਤਸ਼ਾਹਿਤ ਕਰਨਾ ਅਤੇ ਇਨ੍ਹਾਂ ਉਦੇਸ਼ਾਂ ਨੂੰ ਅੱਗੇ ਵਧਾਉਣ ਲਈ ਸਮਾਨ ਅਕਾਦਮੀ ਸੰਸਥਾਵਾਂ ਅਤੇ ਐਸੋਸੀਏਸ਼ਨਾਂ ਨਾਲ ਸਹਿਯੋਗ ਕਰਨਾ। ਬਿਏਟਰ ਦੇ ਸਬੰਧ ਵਿੱਚ ਐਸ.ਐਨ.ਏ. ਨੇ ਨਾਟਕਕਾਰਾਂ ਲਈ ਵਰਕਸ਼ਾਪਾਂ ਦਾ ਆਯੋਜਨ ਕੀਤਾ ਹੈ ਜੋ ਕਿ ਰਵਾਇਤੀ ਪ੍ਰਦਰਸ਼ਨ ਕਲਾ ਵਿੱਚ ਅੰਤਰਰਾਸ਼ੀ ਸਭਿਆਚਾਰ ਵਟਾਂਦਰਾ ਪ੍ਰੋਗਰਾਮ ਫੰਡ ਖੋਜ ਆਧੁਨਿਕ ਬਿਏਟਰ ਦੇ ਰਵਾਇਤੀ ਪ੍ਰਦਰਸ਼ਨ, ਸੈਡੋ ਬਿਏਟਰ ਮਹਿਉਨਿਥ ਬਿਏਟਰ ਅਤੇ ਹੋਰ ਰੂਪਾਂ ਦੇ ਸਭਿਆਚਾਰਕ ਸੰਸਥਾਵਾਂ ਸੰਗੀਤ ਤਿਉਹਾਰਾਂ ਨੂੰ ਵਿੱਤੀ ਸਹਾਇਤਾ ਪ੍ਰਦਾਨ ਕਰਦਾ ਹੈ। ਕਨਪੁਤਲੀ ਦੇ ਹੋਰ ਰੂਪ ਵਿਲੱਖਣ ਕਲਾਕਾਰ ਨੂੰ ਇਨਾਮ ਅਤੇ ਫੈਲੋਸ਼ਿਪ ਦਿੰਦੇ ਹਨ। ਆਡੀਓ ਟੇਪਾਂ ਦੇ ਵੀਡੀਓ ਅਤੇ ਫੋਟੋਆਂ ਨੂੰ ਇਕੱਠਾ ਕਰਦੇ ਹਨ ਅਤੇ ਇੱਕ ਆਡੀਓ ਵਿਜ਼ੁਅਲ ਅਵਿਲੱਖਾਕਾਰ ਦੇ ਨਾਲ ਨਾਲ ਇੱਕ ਲਾਇਬ੍ਰੇਰੀ ਦਾ ਪ੍ਰਬੰਧਨ ਕਰਦੇ ਹਨ।

ਉੱਪਰ ਲਿਖੇ ਪੈਰ੍ਹੇ ਨੂੰ ਪੜ੍ਹਨ ਤੋਂ ਬਾਅਦ ਹੇਠਾਂ ਲਿਖੇ ਪ੍ਰਸ਼ਨਾਂ ਦੇ ਉੱਤਰ ਦਿਓ:

ਦਰੁਤ ਸ਼ੁਰੂ ਤੋਂ ਅੰਤ ਤੱਕ ਅਤੇ ਮੱਧ ਲੈਅ ਮੱਧ ਵਿੱਚ ਹੈ: ਨਿਮਨਲਿਖਿਤ ਵਿੱਚੋਂ ਦੱਸੋ-

1. ਸਮ
2. ਪਿਪਿਲਿਕਾ
3. ਗੋਪੁਚਾ
4. ਮ੍ਰਿਦੰਗਾ

**Options :**

485584134513. 1  
485584134514. 2  
485584134515. 3  
485584134516. 4

**Question Number : 265 Question Id : 48558433630 Question Type : MCQ Option Shuffling : No Is Question Mandatory : No Calculator : None Response Time : N.A Think Time : N.A Minimum Instruction Time : 0**

**Correct Marks : 5 Wrong Marks : 1**

**Question Key Details :**

Key	Value
Comprehension	Comp3

There is a great importance of laya in Indian Talas. Laya has been categorised basically into three types - Vilambit, Madhya and Druta. The rule of application in various forms of laya is called 'Yati'. Yati denotes application of 'gati'. Yati has been classified into five types, Sama, Strotogata, Gopuchha, Mridanga and Pipilika. In sama yati, the same laya is used throughout, that is beginning to end. In strotogata, initially we use slow (vilambit) laya whereas Madhya occurs in the middle and Drut laya comes at the end. When it comes to Gopuchha, exactly inverse order of layas is put to application vis a vis strotogata meaning thereby in the later Druta, Madhya laya and Vilambit laya occurs in the first, middle and last order. In Mridanga, drut laya is used at the outset as well as at the end and Madhya laya is used amidst thereof. In Pipilika, vilambit laya occurs in the beginning, at the end while madhya laya is used in middle order, hence 'Yati' is an important aspect of tala's Das Pranas.

Read the above passage and answer the following questions:

The sequence of laya in strotogata is:

1. Vilambit - Madhya - Drut
2. Drut - Madhya - Drut
3. Drut - Drut - Madhya
4. Madhya - Vilambit - Drut

**Options :**

485584134517. 1  
485584134518. 2  
485584134519. 3  
485584134520. 4



Question Number : 265 Question Id : 48558433630 Question Type : MCQ Option Shuffling : No Is Question Mandatory : No Calculator : None Response Time : N.A Think Time : N.A Minimum Instruction Time : 0

Correct Marks : 5 Wrong Marks : 1

Question Key Details :

Key	Value
Comprehension	Comp3

ਸੰਗੀਤ ਨਾਟਕ ਅਕਾਦਮੀ (ਐਸ.ਐਨ.ਏ.)

ਸੰਗੀਤ ਕਲਾ ਅਕਾਦਮੀ ਦੀ ਸਥਾਪਨਾ 31 ਮਈ 1952 ਨੂੰ ਕੀਤੀ ਗਈ ਸੀ। 28 ਜੁਨਵਰੀ 1953 ਨੂੰ ਉਦਘਾਟਨ ਸਮੇਂ ਆਪਣੇ ਭਾਸ਼ਣ ਵਿੱਚ ਮੌਲਾਨਾ ਆਜ਼ਾਦ (1888-1958) ਨੇ ਉਸ ਸਮੇਂ ਦੇ ਕੇਂਦਰੀ ਸਿੱਖਿਆ ਮੰਤਰੀ ਅਤੇ ਬਾਅਦ ਵਿੱਚ ਸਭਿਆਚਾਰਕ ਸਬੰਧਾਂ ਲਈ ਭਾਰਤੀ ਕੌਮਲ ਦੇ ਸੰਸਥਾਪਕ ਨੇ ਕਿਹਾ ਕਿ ਐਸ ਐਨ ਏ ਦਾ ਉਦੇਸ਼ ਸਾਡੀਆਂ ਪਰੰਪਰਾਵਾਂ ਨੂੰ ਸੰਸਥਾਗਤ ਰੂਪ ਵਜੋਂ ਪੇਸ਼ ਕਰਕੇ ਉਨ੍ਹਾਂ ਨੂੰ ਸੁਰੱਖਿਅਤ ਰੱਖਣਾ ਸੀ।

ਐਸ ਐਨ ਏ ਦੀ ਮੰਗ ਨੂੰ ਇਸਦੇ ਮੈਮੋਰੈਂਡਮ ਆਫ਼ ਐਸੋਸੀਏਸ਼ਨ ਵਿੱਚ ਦੱਸਿਆ ਗਿਆ ਹੈ ਭਾਰਤੀ ਸੰਗੀਤ ਨਿਤ ਅਤੇ ਨਾਟਕ ਦੇ ਖੇਤਰਾਂ ਵਿੱਚ ਖੋਜ ਨੂੰ ਉਤਸ਼ਾਹਿਤ ਕਰਨ ਲਈ ਅਤੇ ਇਸ ਉਦੇਸ਼ ਲਈ ਇੱਕ ਲਾਇਬ੍ਰੇਰੀ ਅਤੇ ਇੱਕ ਅਜਾਇਬ ਘਰ ਦੀ ਸਥਾਪਨਾ ਕਰਨਾ ਅਤੇ ਖੋਜ ਨੂੰ ਪ੍ਰਕਾਸ਼ਿਤ ਕਰਨ ਲਈ ਸੰਗੀਤ ਨਾਚ ਅਤੇ ਨਾਟਕ ਦੀ ਕਲਾ ਦੇ ਸਬੰਧ ਵਿੱਚ ਵੱਖ-ਵੱਖ ਧਰਮਾਂ ਦੇ ਵਿਚਕਾਰ ਵਿਚਾਰਾਂ ਦੇ ਆਦਾਨ ਪ੍ਰਦਾਨ ਅਤੇ ਤਕਨੀਕ ਨੂੰ ਵਧਾਉਣ ਲਈ ਉਤਸ਼ਾਹਿਤ ਕਰਨਾ। ਵੱਖ-ਵੱਖ ਖੇਤਰਾਂ ਵਿੱਚ ਲੋਕ ਪਰੰਪਰਾਵਾਂ ਨੂੰ ਮੁੜ ਸੁਰਜੀਤ ਕਰਨ ਅਤੇ ਸੁਰੱਖਿਅਤ ਰੱਖਣ ਲਈ ਤਿਉਹਾਰਾਂ ਦੇ ਸਮੀਨਾਰ ਅਤੇ ਕਾਨਫਰੰਸਾਂ ਨੂੰ ਸਪੱਸ਼ਟ ਕਰਨ ਲਈ ਉਤਸ਼ਾਹਿਤ ਕਰਨ ਲਈ, ਵਿਅਕਤੀਗਤ ਕਲਾਕਾਰਾਂ ਨੂੰ ਸ਼ਾਨਦਾਰ ਪ੍ਰਾਪਤੀ ਦੀ ਮਾਨਤਾ ਦੇਣ ਲਈ, ਦੇਸ਼ ਦੇ ਵੱਖ-ਵੱਖ ਖੇਤਰਾਂ ਅਤੇ ਦੂਜੇ ਦੇਸ਼ਾਂ ਦੇ ਵਿਚਕਾਰ ਸਭਿਆਚਾਰਕ ਸੰਪਰਕ ਨੂੰ ਉਤਸ਼ਾਹਿਤ ਕਰਨਾ ਅਤੇ ਇਨ੍ਹਾਂ ਉਦੇਸ਼ਾਂ ਨੂੰ ਅੱਗੇ ਵਧਾਉਣ ਲਈ ਸਮਾਨ ਅਕਾਦਮੀ ਸੰਸਥਾਵਾਂ ਅਤੇ ਐਸੋਸੀਏਸ਼ਨਾਂ ਨਾਲ ਸਹਿਯੋਗ ਕਰਨਾ। ਥਿਏਟਰ ਦੇ ਸਬੰਧ ਵਿੱਚ ਐਸ.ਐਨ.ਏ. ਨੇ ਨਾਟਕਕਾਰਾਂ ਲਈ ਵਰਕਸ਼ਾਪਾਂ ਦਾ ਆਯੋਜਨ ਕੀਤਾ ਹੈ ਜੋ ਕਿ ਰਵਾਇਤੀ ਪ੍ਰਦਰਸ਼ਨ ਕਲਾ ਵਿੱਚ ਅੰਤਰਰਾਸ਼ੀ ਸਭਿਆਚਾਰ ਵਟਾਂਦਰਾ ਪ੍ਰੋਗਰਾਮ ਫੰਡ ਖੋਜ ਆਧੁਨਿਕ ਥਿਏਟਰ ਦੇ ਰਵਾਇਤੀ ਪ੍ਰਦਰਸ਼ਨ, ਸੈਡੇ ਥਿਏਟਰ ਮਰਿਉਨਥ ਥਿਏਟਰ ਅਤੇ ਹੋਰ ਰੂਪਾਂ ਦੇ ਸਭਿਆਚਾਰਕ ਸੰਸਥਾਵਾਂ ਸੰਗੀਤ ਨਿਤ ਤਿਉਹਾਰਾਂ ਨੂੰ ਵਿੱਤੀ ਸਹਾਇਤਾ ਪ੍ਰਦਾਨ ਕਰਦਾ ਹੈ। ਕਨਪੁਤਲੀ ਦੇ ਹੋਰ ਰੂਪ ਵਿਲੱਖਣ ਕਲਾਕਾਰ ਨੂੰ ਇਨਾਮ ਅਤੇ ਫੈਲੋਸ਼ਿਪ ਦਿੰਦੇ ਹਨ। ਆਡੀਓ ਟੇਪਾਂ ਦੇ ਵੀਡੀਓ ਅਤੇ ਫੋਟੋਆਂ ਨੂੰ ਇਕੱਠਾ ਕਰਦੇ ਹਨ ਅਤੇ ਇੱਕ ਆਡੀਓ ਵਿਜ਼ੁਅਲ ਅਵਿਲੇਖਾਕਾਰ ਦੇ ਨਾਲ ਨਾਲ ਇੱਕ ਲਾਇਬ੍ਰੇਰੀ ਦਾ ਪ੍ਰਬੰਧਨ ਕਰਦੇ ਹਨ।

ਉੱਪਰ ਲਿਖੇ ਪੈਰ੍ਹੇ ਨੂੰ ਪੜ੍ਹਨ ਤੋਂ ਬਾਅਦ ਹੇਠਾਂ ਲਿਖੇ ਪ੍ਰਸ਼ਨਾਂ ਦੇ ਉੱਤਰ ਦਿਓ:

ਲੇਅ ਦਾ ਕ੍ਰਮ ਸਟ੍ਰੋਟੋਗਾਟਾ ਵਿੱਚ ਕਿਸ ਵਿੱਚ ਹੈ:

1. ਵਿਲੰਬਿਤ-ਮੱਧਮ-ਦਰੁਤ
2. ਦਰੁਤ-ਮੱਧਮ-ਦਰੁਤ
3. ਦਰੁਤ-ਦਰੁਤ-ਮੱਧਮ
4. ਮੱਧਮ-ਵਿਲੰਬਿਤ-ਦਰੁਤ

Options :

485584134517. 1  
485584134518. 2  
485584134519. 3  
485584134520. 4

Sub-Section Number : 4  
Sub-Section Id : 4855842437  
Question Shuffling Allowed : No  
Is Section Default? : null

Question Number : 266 Question Id : 48558433631 Question Type : MCQ Option Shuffling : No Is Question Mandatory : No Calculator : None Response Time : N.A Think Time : N.A Minimum Instruction Time : 0

Correct Marks : 5 Wrong Marks : 1

Question Key Details :

Key	Value
Comprehension	Comp4

Read the following passage and answer the questions given below:

### Sangeet Natak Akademi (SNA)

The SNA was established on 31 May 1952. In his speech at the inauguration on 28 January 1953, Maulana Azad (1888-1958), then Union Minister for Education and later founder of the Indian Council for Cultural Relations (ICCR), said that the aim of the SNA was to 'preserve our traditions by offering them an institutional form'.

The SNA's mission, stated in its Memorandum of Association is:

To promote research in the fields of Indian music, dance and drama and for this purpose to establish a library and a museum; to encourage the exchange of ideas and enrichment of techniques between the different regions in regard to the arts of music, dance and drama; to publish research on Indian performing arts; to revive and preserve folk traditions in different regions; to sponsor and encourage festival, seminars and conferences; to give recognition to individual artists for outstanding achievement; to foster cultural contacts between different regions of the country and with other countries; and to cooperate with similar Akademis, institutions and associations for the furtherance of these objectives

With respect to theatre, the SNA holds workshops for playwrights; funds interstate cultural exchange programmes; funds research in the traditional performing arts; offers financial support to cultural institutions; organizes festivals of modern theatre, traditional performance, shadow theatre, marionette theatre and other forms of puppetry; gives awards and fellowship to distinguished artists; collects audiotapes, videos and photographs; and maintains an audiovisual archive as well as a library.

When was the Sangeet Natak Akademi inaugurated?

1. 1952
2. 1953
3. 1954
4. 1950

**Options :**

- 485584134521. 1
- 485584134522. 2
- 485584134523. 3
- 485584134524. 4

**Question Number : 266 Question Id : 48558433631 Question Type : MCQ Option Shuffling : No Is Question Mandatory : No Calculator : None Response Time : N.A Think Time : N.A Minimum Instruction Time : 0**

**Correct Marks : 5 Wrong Marks : 1**

**Question Key Details :**

Key	Value
Comprehension	Comp4

ਭਾਰਤੀ ਕਥਾਵਾਂ ਵਿੱਚ ਲੈਅ ਦਾ ਬਹੁਤ ਮਹੱਤਵ ਹੈ। ਲੈਅ ਨੂੰ ਮੂਲ ਰੂਪ ਵਿੱਚ ਤਿੰਨ ਕਿਸਮਾਂ ਵਿੱਚ ਵਰਗੀਕ੍ਰਿਤ ਕੀਤਾ ਗਿਆ ਹੈ- ਵਿਲੰਬਿਤ, ਮੱਧ ਅਤੇ ਦਰੁਤ। ਲੈਅ ਦੇ ਵੱਖ-ਵੱਖ ਰੂਪਾਂ ਵਿੱਚ ਲਾਗੂ ਕਰਨ ਦੇ ਨਿਯਮ ਨੂੰ ਯਤੀ ਕਿਹਾ ਜਾਂਦਾ ਹੈ। ਯਤੀ ਗਤੀ ਦੇ ਉਪਯੋਗ / ਵਰਤੋਂ ਨੂੰ ਦਰੁਸਾਉਂਦਾ ਹੈ। ਯਤੀ ਨੂੰ ਪੰਜ ਕਿਸਮਾਂ ਵਿੱਚ ਸ਼੍ਰੇਣੀਬੱਧ/ ਵਰਗੀਕ੍ਰਿਤ ਕੀਤਾ ਗਿਆ ਹੈ- ਸਮ, ਸਟੇਟੇਗਾਟਾ, ਗੋਪੁਚਾ, ਮਿਦੁੰਗਾ ਅਤੇ ਪਿਪਲਿਕਾ। ਸਮ ਯਤੀ ਵਿੱਚ ਉਹੀ ਲੈਅ ਵਰਤੀ ਜਾਂਦੀ ਹੈ ਜਿਸਦਾ ਅਰੰਭ ਅਤੇ ਅੰਤ ਹੁੰਦਾ ਹੈ। ਸਟੇਟੇਗਾਟਾ ਵਿੱਚ ਸ਼ੁਰੂ ਵਿੱਚ ਇਸਨੂੰ ਹੌਲੀ (ਵਿਲੰਬਿਤ) ਵਰਤਿਆ ਜਾਂਦਾ ਹੈ। ਜਦੋਂ ਕਿ ਮੱਧ ਮੱਧ ਵਿੱਚ ਹੁੰਦੀ ਹੈ ਅਤੇ ਦਰੁਤ ਲੈਅ ਅੰਤ ਵਿੱਚ ਆਉਂਦੀ ਹੈ। ਜਦੋਂ ਗੋਪੁਚਾ ਦੀ ਗੱਲ ਆਉਂਦੀ ਹੈ ਤਾਂ ਲੈਅ ਦਾ ਪ੍ਰਯੋਗ ਬਿਲਕੁਲ ਉਲਟ ਕ੍ਰਮ ਵਿੱਚ ਹੋ ਜਾਂਦਾ ਹੈ।

ਅਰਥਾਤ ਇਸ ਤਰ੍ਹਾਂ ਬਾਅਦ ਵਾਲੇ ਦਰੁਤ ਵਿੱਚ ਮੱਧ ਲੈਅ ਅਤੇ ਵਿਲੰਬਿਤ ਲੈਅ ਪਹਿਲੇ ਮੱਧ ਅਤੇ ਆਖਰੀ ਕ੍ਰਮ ਵਿੱਚ ਆਉਂਦੇ ਹਨ। ਮਿਦੁੰਗਾ ਵਿੱਚ ਦਰੁਤ ਲੈਅ ਦੀ ਵਰਤੋਂ ਸ਼ੁਰੂ ਵਿੱਚ ਅਤੇ ਅੰਤ ਵਿੱਚ ਕੀਤੀ ਜਾਂਦੀ ਹੈ ਅਤੇ ਮੱਧ ਲੈਅ ਉਨ੍ਹਾਂ ਦੇ ਵਿਚਕਾਰ ਵਰਤੀ ਜਾਂਦੀ ਹੈ। ਜਦੋਂ ਕਿ ਮੱਧ ਲੈਅ ਮੱਧ ਕ੍ਰਮ ਵਿੱਚ ਵਰਤੀ ਜਾਂਦੀ ਹੈ ਅਤੇ ਅੰਤ ਵਿੱਚ ਵਾਪਰਦੀ ਹੈ। ਇਸ ਲਈ ਯਤੀ ਤਾਲ ਦੇ ਦਸ ਪ੍ਰਕਾਰਾਂ ਦਾ ਮਹੱਤਵਪੂਰਨ ਪਹਿਲੂ ਹੈ।

ਸੰਗੀਤ ਨਾਟਕ ਅਕਾਦਮੀ ਕਦੋਂ ਉਦਘਾਟਿਤ ਹੋਈ?

1. 1952
2. 1953
3. 1954
4. 1950

**Options :**

485584134521. 1  
 485584134522. 2  
 485584134523. 3  
 485584134524. 4

**Question Number : 267 Question Id : 48558433632 Question Type : MCQ Option Shuffling : No Is Question Mandatory : No Calculator : None Response Time : N.A Think Time : N.A Minimum Instruction Time : 0**

**Correct Marks : 5 Wrong Marks : 1**

**Question Key Details :**

Key	Value
Comprehension	Comp4

Read the following passage and answer the questions given below:

### Sangeet Natak Akademi (SNA)

The SNA was established on 31 May 1952. In his speech at the inauguration on 28 January 1953, Maulana Azad (1888-1958), then Union Minister for Education and later founder of the Indian Council for Cultural Relations (ICCR), said that the aim of the SNA was to 'preserve our traditions by offering them an institutional form'.

The SNA's mission, stated in its Memorandum of Association is:

To promote research in the fields of Indian music, dance and drama and for this purpose to establish a library and a museum; to encourage the exchange of ideas and enrichment of techniques between the different regions in regard to the arts of music, dance and drama; to publish research on Indian performing arts; to revive and preserve folk traditions in different regions; to sponsor and encourage festival, seminars and conferences; to give recognition to individual artists for outstanding achievement; to foster cultural contacts between different regions of the country and with other countries; and to cooperate with similar Akademis, institutions and associations for the furtherance of these objectives

With respect to theatre, the SNA holds workshops for playwrights; funds interstate cultural exchange programmes; funds research in the traditional performing arts; offers financial support to cultural institutions; organizes festivals of modern theatre, traditional performance, shadow theatre, marionette theatre and other forms of puppetry; gives awards and fellowship to distinguished artists; collects audiotapes, videos and photographs; and maintains an audiovisual archive as well as a library.

Who among the following was independent India's first Union Minister for Education?

1. Babasaheb Ambedkar
2. Sardar Vallabhbhai Patel
3. Maulana Azad
4. Rajendra Prasad

#### Options :

485584134525. 1  
485584134526. 2  
485584134527. 3  
485584134528. 4

**Question Number : 267 Question Id : 48558433632 Question Type : MCQ Option Shuffling : No Is Question Mandatory : No Calculator : None Response Time : N.A Think Time : N.A Minimum Instruction Time : 0**

**Correct Marks : 5 Wrong Marks : 1**

#### Question Key Details :

Key	Value
Comprehension	Comp4

ਭਾਰਤੀ ਕਥਾਵਾਂ ਵਿੱਚ ਲੈਅ ਦਾ ਬਹੁਤ ਮਹੱਤਵ ਹੈ। ਲੈਅ ਨੂੰ ਮੂਲ ਰੂਪ ਵਿੱਚ ਤਿੰਨ ਕਿਸਮਾਂ ਵਿੱਚ ਵਰਗੀਕ੍ਰਿਤ ਕੀਤਾ ਗਿਆ ਹੈ- ਵਿਲੰਬਿਤ, ਮੱਧਮ ਅਤੇ ਦਰੁਤ। ਲੈਅ ਦੇ ਵੱਖ-ਵੱਖ ਰੂਪਾਂ ਵਿੱਚ ਲਾਗੂ ਕਰਨ ਦੇ ਨਿਯਮ ਨੂੰ ਯਤੀ ਕਿਹਾ ਜਾਂਦਾ ਹੈ। ਯਤੀ ਗਤੀ ਦੇ ਉਪਯੋਗ / ਵਰਤੋਂ ਨੂੰ ਦਰੁਸਾਉਂਦਾ ਹੈ। ਯਤੀ ਨੂੰ ਪੰਜ ਕਿਸਮਾਂ ਵਿੱਚ ਸ਼੍ਰੇਣੀਬੱਧ/ ਵਰਗੀਕ੍ਰਿਤ ਕੀਤਾ ਗਿਆ ਹੈ- ਸਮ, ਸਟੇਟੇਗਾਟਾ, ਗੋਪੁਚਾ, ਮਿਦੰਗਾ ਅਤੇ ਪਿਪਲਿਕਾ। ਸਮ ਯਤੀ ਵਿੱਚ ਉਹੀ ਲੈਅ ਵਰਤੀ ਜਾਂਦੀ ਹੈ ਜਿਸਦਾ ਅਰੰਭ ਅਤੇ ਅੰਤ ਹੁੰਦਾ ਹੈ। ਸਟੇਟੇਗਾਟਾ ਵਿੱਚ ਸ਼ੁਰੂ ਵਿੱਚ ਇਸਨੂੰ ਹੌਲੀ (ਵਿਲੰਬਿਤ) ਵਰਤਿਆ ਜਾਂਦਾ ਹੈ। ਜਦੋਂ ਕਿ ਮੱਧਮ ਮੱਧ ਵਿੱਚ ਹੁੰਦੀ ਹੈ ਅਤੇ ਦਰੁਤ ਲੈਅ ਅੰਤ ਵਿੱਚ ਆਉਂਦੀ ਹੈ। ਜਦੋਂ ਗੋਪੁਚਾ ਦੀ ਗੱਲ ਆਉਂਦੀ ਹੈ ਤਾਂ ਲੈਅ ਦਾ ਪ੍ਰਯੋਗ ਬਿਲਕੁਲ ਉਲਟ ਕ੍ਰਮ ਵਿੱਚ ਹੋ ਜਾਂਦਾ ਹੈ।

ਅਰਥਾਤ ਇਸ ਤਰ੍ਹਾਂ ਬਾਅਦ ਵਾਲੇ ਦਰੁਤ ਵਿੱਚ ਮੱਧ ਲੈਅ ਅਤੇ ਵਿਲੰਬਿਤ ਲੈਅ ਪਹਿਲੇ ਮੱਧ ਅਤੇ ਆਖਰੀ ਕ੍ਰਮ ਵਿੱਚ ਆਉਂਦੇ ਹਨ। ਮਿਦੰਗਾ ਵਿੱਚ ਦਰੁਤ ਲੈਅ ਦੀ ਵਰਤੋਂ ਸ਼ੁਰੂ ਵਿੱਚ ਅਤੇ ਅੰਤ ਵਿੱਚ ਕੀਤੀ ਜਾਂਦੀ ਹੈ ਅਤੇ ਮੱਧ ਲੈਅ ਉਨ੍ਹਾਂ ਦੇ ਵਿਚਕਾਰ ਵਰਤੀ ਜਾਂਦੀ ਹੈ। ਜਦੋਂ ਕਿ ਮੱਧ ਲੈਅ ਮੱਧ ਕ੍ਰਮ ਵਿੱਚ ਵਰਤੀ ਜਾਂਦੀ ਹੈ ਅਤੇ ਅੰਤ ਵਿੱਚ ਵਾਪਰਦੀ ਹੈ। ਇਸ ਲਈ ਯਤੀ ਤਾਲ ਦੇ ਦਸ ਪ੍ਰਾਣਾਂ ਦਾ ਮਹੱਤਵਪੂਰਨ ਪਹਿਲੂ ਹੈ।

ਹੇਠ ਲਿਖਿਆਂ ਵਿੱਚੋਂ ਕੌਣ ਸੁਤੰਤਰ ਭਾਰਤ ਦੇ ਪਹਿਲੇ ਸਿੱਖਿਆ ਦੇ/ਲਈ ਯੂਨੀਅਨ ਮਨੀਟਰ ਸਨ?

1. ਬਾਬਾ ਸਾਹਿਬ ਅੰਬੇਡਕਰ
2. ਸਰਦਾਰ ਵੱਲਭ ਭਾਈ ਪਟੇਲ
3. ਮੌਲਾਨਾ ਆਜ਼ਾਦ
4. ਰਾਜੇਂਦਰ ਪ੍ਰਸਾਦ

**Options :**

- 485584134525. 1
- 485584134526. 2
- 485584134527. 3
- 485584134528. 4

**Question Number : 268 Question Id : 48558433633 Question Type : MCQ Option Shuffling : No Is Question Mandatory : No Calculator : None Response Time : N.A Think Time : N.A Minimum Instruction Time : 0**

**Correct Marks : 5 Wrong Marks : 1**

**Question Key Details :**

Key	Value
Comprehension	Comp4

Read the following passage and answer the questions given below:

### Sangeet Natak Akademi (SNA)

The SNA was established on 31 May 1952. In his speech at the inauguration on 28 January 1953, Maulana Azad (1888-1958), then Union Minister for Education and later founder of the Indian Council for Cultural Relations (ICCR), said that the aim of the SNA was to 'preserve our traditions by offering them an institutional form'.

The SNA's mission, stated in its Memorandum of Association is:

To promote research in the fields of Indian music, dance and drama and for this purpose to establish a library and a museum; to encourage the exchange of ideas and enrichment of techniques between the different regions in regard to the arts of music, dance and drama; to publish research on Indian performing arts; to revive and preserve folk traditions in different regions; to sponsor and encourage festival, seminars and conferences; to give recognition to individual artists for outstanding achievement; to foster cultural contacts between different regions of the country and with other countries; and to cooperate with similar Akademis, institutions and associations for the furtherance of these objectives

With respect to theatre, the SNA holds workshops for playwrights; funds interstate cultural exchange programmes; funds research in the traditional performing arts; offers financial support to cultural institutions; organizes festivals of modern theatre, traditional performance, shadow theatre, marionette theatre and other forms of puppetry; gives awards and fellowship to distinguished artists; collects audiotapes, videos and photographs; and maintains an audiovisual archive as well as a library.

'To preserve our traditions by offering them an institutional form', was the aim of:

1. Indian Council for Cultural Relations
2. National School of Drama
3. Lalitkala Akademi
4. Sangeet Natak Akademi

#### Options :

485584134529. 1  
485584134530. 2  
485584134531. 3  
485584134532. 4

**Question Number : 268 Question Id : 48558433633 Question Type : MCQ Option Shuffling : No Is Question Mandatory : No Calculator : None Response Time : N.A Think Time : N.A Minimum Instruction Time : 0**

**Correct Marks : 5 Wrong Marks : 1**

#### Question Key Details :

Key	Value
Comprehension	Comp4

ਭਾਰਤੀ ਕਥਾਵਾਂ ਵਿੱਚ ਲੈਅ ਦਾ ਬਹੁਤ ਮਹੱਤਵ ਹੈ। ਲੈਅ ਨੂੰ ਮੂਲ ਰੂਪ ਵਿੱਚ ਤਿੰਨ ਕਿਸਮਾਂ ਵਿੱਚ ਵਰਗੀਕ੍ਰਿਤ ਕੀਤਾ ਗਿਆ ਹੈ- ਵਿਲੰਬਿਤ, ਮੱਧ ਅਤੇ ਦਰੁਤ। ਲੈਅ ਦੇ ਵੱਖ-ਵੱਖ ਰੂਪਾਂ ਵਿੱਚ ਲਾਗੂ ਕਰਨ ਦੇ ਨਿਯਮ ਨੂੰ ਯਤੀ ਕਿਹਾ ਜਾਂਦਾ ਹੈ। ਯਤੀ ਗਤੀ ਦੇ ਉਪਯੋਗ / ਵਰਤੋਂ ਨੂੰ ਦਰਸਾਉਂਦਾ ਹੈ। ਯਤੀ ਨੂੰ ਪੰਜ ਕਿਸਮਾਂ ਵਿੱਚ ਸ਼੍ਰੇਣੀਬੱਧ/ ਵਰਗੀਕ੍ਰਿਤ ਕੀਤਾ ਗਿਆ ਹੈ- ਸਮ, ਸਟੇਟੇਗਾਟਾ, ਗੋਪੁਚਾ, ਮਿਦੰਗਾ ਅਤੇ ਪਿਪਲਿਕਾ। ਸਮ ਯਤੀ ਵਿੱਚ ਉਹੀ ਲੈਅ ਵਰਤੀ ਜਾਂਦੀ ਹੈ ਜਿਸਦਾ ਅਰੰਭ ਅਤੇ ਅੰਤ ਹੁੰਦਾ ਹੈ। ਸਟੇਟੇਗਾਟਾ ਵਿੱਚ ਸ਼ੁਰੂ ਵਿੱਚ ਇਸਨੂੰ ਹੌਲੀ (ਵਿਲੰਬਿਤ) ਵਰਤਿਆ ਜਾਂਦਾ ਹੈ। ਜਦੋਂ ਕਿ ਮੱਧ ਮੱਧ ਵਿੱਚ ਹੁੰਦੀ ਹੈ ਅਤੇ ਦਰੁਤ ਲੈਅ ਅੰਤ ਵਿੱਚ ਆਉਂਦੀ ਹੈ। ਜਦੋਂ ਗੋਪੁਚਾ ਦੀ ਗੱਲ ਆਉਂਦੀ ਹੈ ਤਾਂ ਲੈਅ ਦਾ ਪ੍ਰਯੋਗ ਬਿਲਕੁਲ ਉਲਟ ਕ੍ਰਮ ਵਿੱਚ ਹੋ ਜਾਂਦਾ ਹੈ।

ਅਰਥਾਤ ਇਸ ਤਰ੍ਹਾਂ ਬਾਅਦ ਵਾਲੇ ਦਰੁਤ ਵਿੱਚ ਮੱਧ ਲੈਅ ਅਤੇ ਵਿਲੰਬਿਤ ਲੈਅ ਪਹਿਲੇ ਮੱਧ ਅਤੇ ਆਖਰੀ ਕ੍ਰਮ ਵਿੱਚ ਆਉਂਦੇ ਹਨ। ਮਿਦੰਗਾ ਵਿੱਚ ਦਰੁਤ ਲੈਅ ਦੀ ਵਰਤੋਂ ਸ਼ੁਰੂ ਵਿੱਚ ਅਤੇ ਅੰਤ ਵਿੱਚ ਕੀਤੀ ਜਾਂਦੀ ਹੈ ਅਤੇ ਮੱਧ ਲੈਅ ਉਨ੍ਹਾਂ ਦੇ ਵਿਚਕਾਰ ਵਰਤੀ ਜਾਂਦੀ ਹੈ। ਜਦੋਂ ਕਿ ਮੱਧ ਲੈਅ ਮੱਧ ਕ੍ਰਮ ਵਿੱਚ ਵਰਤੀ ਜਾਂਦੀ ਹੈ ਅਤੇ ਅੰਤ ਵਿੱਚ ਵਾਪਰਦੀ ਹੈ। ਇਸ ਲਈ ਯਤੀ ਤਾਲ ਦੇ ਦਸ ਪ੍ਰਕਾਰਾਂ ਦਾ ਮਹੱਤਵਪੂਰਨ ਪਹਿਲੂ ਹੈ।

ਸਾਡੀਆਂ ਪਰੰਪਰਾਵਾਂ ਨੂੰ ਸੰਭਾਲ ਕੇ ਉਨ੍ਹਾਂ ਨੂੰ ਸੰਸਥਾਗਤ ਰੂਪ ਦੇਣ ਦਾ ਉਦੇਸ਼ ਸੀ-

1. ਸਭਿਆਚਾਰਕ ਸੰਬੰਧਾਂ ਲਈ ਭਾਰਤੀ ਕਾਊਂਸਿਲ
2. ਨੈਸ਼ਨਲ ਸਕੂਲ ਆਫ਼ ਡਰਾਮਾ
3. ਲਲਿਤ ਕਲਾ ਅਕਾਦਮੀ
4. ਸੰਗੀਤ ਨਾਟਕ ਅਕਾਦਮੀ

**Options :**

- 485584134529. 1
- 485584134530. 2
- 485584134531. 3
- 485584134532. 4

**Question Number : 269 Question Id : 48558433634 Question Type : MCQ Option Shuffling : No Is Question Mandatory : No Calculator : None Response Time : N.A Think Time : N.A Minimum Instruction Time : 0**

**Correct Marks : 5 Wrong Marks : 1**

**Question Key Details :**

Key	Value
Comprehension	Comp4

Read the following passage and answer the questions given below:

Sangeet Natak Akademi (SNA)

The SNA was established on 31 May 1952. In his speech at the inauguration on 28 January 1953, Maulana Azad (1888-1958), then Union Minister for Education and later founder of the Indian Council for Cultural Relations (ICCR), said that the aim of the SNA was to 'preserve our traditions by offering them an institutional form'.

The SNA's mission, stated in its Memorandum of Association is:

To promote research in the fields of Indian music, dance and drama and for this purpose to establish a library and a museum; to encourage the exchange of ideas and enrichment of techniques between the different regions in regard to the arts of music, dance and drama; to publish research on Indian performing arts; to revive and preserve folk traditions in different regions; to sponsor and encourage festival, seminars and conferences; to give recognition to individual artists for outstanding achievement; to foster cultural contacts between different regions of the country and with other countries; and to cooperate with similar Akademis, institutions and associations for the furtherance of these objectives

With respect to theatre, the SNA holds workshops for playwrights; funds interstate cultural exchange programmes; funds research in the traditional performing arts; offers financial support to cultural institutions; organizes festivals of modern theatre, traditional performance, shadow theatre, marionette theatre and other forms of puppetry; gives awards and fellowship to distinguished artists; collects audiotapes, videos and photographs; and maintains an audiovisual archive as well as a library.

Which among the following is NOT SNA's mission as stated in its Memorandum of Association?

1. To promote research in the fields of Indian Visual Arts
2. To publish research on Indian Performing Arts
3. To revive and preserve folk traditions in different regions
4. To sponsor and encourage festivals, seminars and conferences

**Options :**

- 485584134533. 1
- 485584134534. 2
- 485584134535. 3
- 485584134536. 4

**Question Number : 269 Question Id : 48558433634 Question Type : MCQ Option Shuffling : No Is Question Mandatory : No Calculator : None Response Time : N.A Think Time : N.A Minimum Instruction Time : 0**

**Correct Marks : 5 Wrong Marks : 1**

**Question Key Details :**

Key	Value
Comprehension	Comp4



ਭਾਰਤੀ ਕਥਾਵਾਂ ਵਿੱਚ ਲੈਅ ਦਾ ਬਹੁਤ ਮਹੱਤਵ ਹੈ। ਲੈਅ ਨੂੰ ਮੂਲ ਰੂਪ ਵਿੱਚ ਤਿੰਨ ਕਿਸਮਾਂ ਵਿੱਚ ਵਰਗੀਕ੍ਰਿਤ ਕੀਤਾ ਗਿਆ ਹੈ- ਵਿਲੰਬਿਤ, ਮੱਧਮ ਅਤੇ ਦਰੁਤ। ਲੈਅ ਦੇ ਵੱਖ-ਵੱਖ ਰੂਪਾਂ ਵਿੱਚ ਲਾਗੂ ਕਰਨ ਦੇ ਨਿਯਮ ਨੂੰ ਯਤੀ ਕਿਹਾ ਜਾਂਦਾ ਹੈ। ਯਤੀ ਗਤੀ ਦੇ ਉਪਯੋਗ / ਵਰਤੋਂ ਨੂੰ ਦਰੁਸਾਉਂਦਾ ਹੈ। ਯਤੀ ਨੂੰ ਪੰਜ ਕਿਸਮਾਂ ਵਿੱਚ ਸ਼੍ਰੇਣੀਬੱਧ/ ਵਰਗੀਕ੍ਰਿਤ ਕੀਤਾ ਗਿਆ ਹੈ- ਸਮ, ਸਟੇਟੇਗਾਟਾ, ਗੋਪੁਚਾ, ਮਿਦੁੰਗਾ ਅਤੇ ਪਿਪਲਿਕਾ। ਸਮ ਯਤੀ ਵਿੱਚ ਉਹੀ ਲੈਅ ਵਰਤੀ ਜਾਂਦੀ ਹੈ ਜਿਸਦਾ ਅਰੰਭ ਅਤੇ ਅੰਤ ਹੁੰਦਾ ਹੈ। ਸਟੇਟੇਗਾਟਾ ਵਿੱਚ ਸ਼ੁਰੂ ਵਿੱਚ ਇਸਨੂੰ ਹੌਲੀ (ਵਿਲੰਬਿਤ) ਵਰਤਿਆ ਜਾਂਦਾ ਹੈ। ਜਦੋਂ ਕਿ ਮੱਧਮ ਮੱਧ ਵਿੱਚ ਹੁੰਦੀ ਹੈ ਅਤੇ ਦਰੁਤ ਲੈਅ ਅੰਤ ਵਿੱਚ ਆਉਂਦੀ ਹੈ। ਜਦੋਂ ਗੋਪੁਚਾ ਦੀ ਗੱਲ ਆਉਂਦੀ ਹੈ ਤਾਂ ਲੈਅ ਦਾ ਪ੍ਰਯੋਗ ਬਿਲਕੁਲ ਉਲਟ ਕ੍ਰਮ ਵਿੱਚ ਹੋ ਜਾਂਦਾ ਹੈ।

ਅਰਥਾਤ ਇਸ ਤਰ੍ਹਾਂ ਬਾਅਦ ਵਾਲੇ ਦਰੁਤ ਵਿੱਚ ਮੱਧ ਲੈਅ ਅਤੇ ਵਿਲੰਬਿਤ ਲੈਅ ਪਹਿਲੇ ਮੱਧ ਅਤੇ ਆਖਰੀ ਕ੍ਰਮ ਵਿੱਚ ਆਉਂਦੇ ਹਨ। ਮਿਦੁੰਗਾ ਵਿੱਚ ਦਰੁਤ ਲੈਅ ਦੀ ਵਰਤੋਂ ਸ਼ੁਰੂ ਵਿੱਚ ਅਤੇ ਅੰਤ ਵਿੱਚ ਕੀਤੀ ਜਾਂਦੀ ਹੈ ਅਤੇ ਮੱਧ ਲੈਅ ਉਨ੍ਹਾਂ ਦੇ ਵਿਚਕਾਰ ਵਰਤੀ ਜਾਂਦੀ ਹੈ। ਜਦੋਂ ਕਿ ਮੱਧ ਲੈਅ ਮੱਧ ਕ੍ਰਮ ਵਿੱਚ ਵਰਤੀ ਜਾਂਦੀ ਹੈ ਅਤੇ ਅੰਤ ਵਿੱਚ ਵਾਪਰਦੀ ਹੈ। ਇਸ ਲਈ ਯਤੀ ਤਾਲ ਦੇ ਦਸ ਪ੍ਰਕਾਰਾਂ ਦਾ ਮਹੱਤਵਪੂਰਨ ਪਹਿਲੂ ਹੈ।

ਹੇਠ ਲਿਖਿਆਂ ਵਿੱਚੋਂ ਕਿਹੜਾ ਇੱਕ ਐਸ.ਐਨ.ਏ. ਦੇ ਮਿਸ਼ਨ ਵਿੱਚ ਨਹੀਂ ਹੈ ਜੋ ਇਸਦੇ ਮੈਮੇਰੰਡਮ ਵਿੱਚ ਦੱਸਿਆ/ਸੰਬੰਧਿਤ ਹੈ-

1. ਭਾਰਤੀ ਵਿਜੁਅਲ ਆਰਟਸ ਦੇ ਖੇਤਰ ਵਿੱਚ ਖੋਜ ਨੂੰ ਉਤਸ਼ਾਹਿਤ ਕਰਨ ਲਈ
2. ਭਾਰਤੀ ਪਰਦਰਸ਼ਨ ਕਲਾਵਾਂ ਤੇ ਖੋਜ ਪ੍ਰਕਾਸ਼ਿਤ ਕਰਨ ਲਈ
3. ਵੱਖ ਵੱਖ ਖੇਤਰਾਂ ਵਿੱਚ ਲੋਕ ਪਰੰਪਰਾਵਾਂ ਨੂੰ ਸੁਰਜੀਤ ਕਰਨ ਅਤੇ ਸੁਰੱਖਿਅਤ ਰੱਖਨ ਲਈ
4. ਤਿਓਹਾਰਾਂ, ਸੈਮੀਨਾਰ ਅਤੇ ਕਾਨਫਰੰਸ ਨੂੰ ਸਪੋਂਸਰ ਅਤੇ ਉਤਸ਼ਾਹਿਤ ਕਰਦੇ ਹਨ

**Options :**

- 485584134533. 1
- 485584134534. 2
- 485584134535. 3
- 485584134536. 4

**Question Number : 270 Question Id : 48558433635 Question Type : MCQ Option Shuffling : No Is Question Mandatory : No Calculator : None Response Time : N.A Think Time : N.A Minimum Instruction Time : 0**

**Correct Marks : 5 Wrong Marks : 1**

**Question Key Details :**

Key	Value
Comprehension	Comp4

Read the following passage and answer the questions given below:

### Sangeet Natak Akademi (SNA)

The SNA was established on 31 May 1952. In his speech at the inauguration on 28 January 1953, Maulana Azad (1888-1958), then Union Minister for Education and later founder of the Indian Council for Cultural Relations (ICCR), said that the aim of the SNA was to 'preserve our traditions by offering them an institutional form'.

The SNA's mission, stated in its Memorandum of Association is:

To promote research in the fields of Indian music, dance and drama and for this purpose to establish a library and a museum; to encourage the exchange of ideas and enrichment of techniques between the different regions in regard to the arts of music, dance and drama; to publish research on Indian performing arts; to revive and preserve folk traditions in different regions; to sponsor and encourage festival, seminars and conferences; to give recognition to individual artists for outstanding achievement; to foster cultural contacts between different regions of the country and with other countries; and to cooperate with similar Akademis, institutions and associations for the furtherance of these objectives

With respect to theatre, the SNA holds workshops for playwrights; funds interstate cultural exchange programmes; funds research in the traditional performing arts; offers financial support to cultural institutions; organizes festivals of modern theatre, traditional performance, shadow theatre, marionette theatre and other forms of puppetry; gives awards and fellowship to distinguished artists; collects audiotapes, videos and photographs; and maintains an audiovisual archive as well as a library.

According to the passage, identify the activities conducted by SNA, with respect to theatre.

- A. Funds international cultural exchange programmes
- B. Holds workshops for playwrights
- C. Funds research in the traditional Fine Arts
- D. Offers financial support to cultural institutions
- E. Gives awards and fellowships to distinguished artists

Choose the correct answer from the options given below:

1. A, B and D only
2. B, D and E only
3. B, C and E only
4. C, D and E only

#### Options :

- 485584134537. 1
- 485584134538. 2
- 485584134539. 3
- 485584134540. 4

**Question Number : 270 Question Id : 48558433635 Question Type : MCQ Option Shuffling : No Is Question Mandatory : No Calculator : None Response Time : N.A Think Time : N.A Minimum Instruction Time : 0**

**Correct Marks : 5 Wrong Marks : 1**

**Question Key Details :**

Key	Value
-----	-------

ਭਾਰਤੀ ਕਥਾਵਾਂ ਵਿੱਚ ਲੈਅ ਦਾ ਬਹੁਤ ਮਹੱਤਵ ਹੈ। ਲੈਅ ਨੂੰ ਮੂਲ ਰੂਪ ਵਿੱਚ ਤਿੰਨ ਕਿਸਮਾਂ ਵਿੱਚ ਵਰਗੀਕ੍ਰਿਤ ਕੀਤਾ ਗਿਆ ਹੈ- ਵਿਲੰਬਿਤ, ਮੱਧਮ ਅਤੇ ਦਰੁਤ। ਲੈਅ ਦੇ ਵੱਖ-ਵੱਖ ਰੂਪਾਂ ਵਿੱਚ ਲਾਗੂ ਕਰਨ ਦੇ ਨਿਯਮ ਨੂੰ ਯਤੀ ਕਿਹਾ ਜਾਂਦਾ ਹੈ। ਯਤੀ ਗਤੀ ਦੇ ਉਪਯੋਗ / ਵਰਤੋਂ ਨੂੰ ਦਰਸਾਉਂਦਾ ਹੈ। ਯਤੀ ਨੂੰ ਪੰਜ ਕਿਸਮਾਂ ਵਿੱਚ ਸ਼੍ਰੇਣੀਬੱਧ/ ਵਰਗੀਕ੍ਰਿਤ ਕੀਤਾ ਗਿਆ ਹੈ- ਸਮ, ਸਟੇਟੇਗਾਟਾ, ਗੋਪੁਚਾ, ਮਿਦੰਗਾ ਅਤੇ ਪਿਪਲਿਕਾ। ਸਮ ਯਤੀ ਵਿੱਚ ਉਹੀ ਲੈਅ ਵਰਤੀ ਜਾਂਦੀ ਹੈ ਜਿਸਦਾ ਅਰੰਭ ਅਤੇ ਅੰਤ ਹੁੰਦਾ ਹੈ। ਸਟੇਟੇਗਾਟਾ ਵਿੱਚ ਸ਼ੁਰੂ ਵਿੱਚ ਇਸਨੂੰ ਹੌਲੀ (ਵਿਲੰਬਿਤ) ਵਰਤਿਆ ਜਾਂਦਾ ਹੈ। ਜਦੋਂ ਕਿ ਮੱਧਮ ਮੱਧ ਵਿੱਚ ਹੁੰਦੀ ਹੈ ਅਤੇ ਦਰੁਤ ਲੈਅ ਅੰਤ ਵਿੱਚ ਆਉਂਦੀ ਹੈ। ਜਦੋਂ ਗੋਪੁਚਾ ਦੀ ਗੱਲ ਆਉਂਦੀ ਹੈ ਤਾਂ ਲੈਅ ਦਾ ਪ੍ਰਯੋਗ ਬਿਲਕੁਲ ਉਲਟ ਕ੍ਰਮ ਵਿੱਚ ਹੋ ਜਾਂਦਾ ਹੈ।

ਅਰਥਾਤ ਇਸ ਤਰ੍ਹਾਂ ਬਾਅਦ ਵਾਲੇ ਦਰੁਤ ਵਿੱਚ ਮੱਧ ਲੈਅ ਅਤੇ ਵਿਲੰਬਿਤ ਲੈਅ ਪਹਿਲੇ ਮੱਧ ਅਤੇ ਆਖਰੀ ਕ੍ਰਮ ਵਿੱਚ ਆਉਂਦੇ ਹਨ। ਮਿਦੰਗਾ ਵਿੱਚ ਦਰੁਤ ਲੈਅ ਦੀ ਵਰਤੋਂ ਸ਼ੁਰੂ ਵਿੱਚ ਅਤੇ ਅੰਤ ਵਿੱਚ ਕੀਤੀ ਜਾਂਦੀ ਹੈ ਅਤੇ ਮੱਧ ਲੈਅ ਉਨ੍ਹਾਂ ਦੇ ਵਿਚਕਾਰ ਵਰਤੀ ਜਾਂਦੀ ਹੈ। ਜਦੋਂ ਕਿ ਮੱਧ ਲੈਅ ਮੱਧ ਕ੍ਰਮ ਵਿੱਚ ਵਰਤੀ ਜਾਂਦੀ ਹੈ ਅਤੇ ਅੰਤ ਵਿੱਚ ਵਾਪਰਦੀ ਹੈ। ਇਸ ਲਈ ਯਤੀ ਤਾਲ ਦੇ ਦਸ ਪ੍ਰਾਣਾਂ ਦਾ ਮਹੱਤਵਪੂਰਨ ਪਹਿਲੂ ਹੈ।

ਹਵਾਲੇ ਦੇ ਅਨੁਸਾਰ ਥਿਏਟਰ ਦੇ ਸੰਬੰਧ ਵਿੱਚ ਐਸ.ਐਨ.ਏ. ਦੁਆਰਾ ਕੀਤੀਆਂ ਗਤਿਵਿਧਿਆਂ ਦੀ ਪਛਾਣ ਕਰੋ:

- ਅੰਤਰਰਾਸ਼ਟਰੀ ਸਭਿਆਚਾਰਕ ਵਟਾਂਦਰਾ ਪ੍ਰੋਗ੍ਰਾਮ ਨੂੰ ਫੰਡ/ਪੈਸਾ ਦੇਣਾ।
- ਨਾਟਕਾਰਾਂ ਲਈ ਵਰਕਸ਼ਾਪਾਂ ਦਾ ਆਯੋਜਨ।
- ਰਵਾਇਤੀ ਵਧੀਆ ਕਲਾ ਵਿੱਚ ਖੋਜ ਨੂੰ ਫੰਡ ਕਰਦਾ ਹੈ।
- ਸਭਿਆਚਾਰਕ ਸੰਸਥਾਵਾਂ ਨੂੰ ਵਿਤੀ ਸਹਾਇਤਾ ਦੀ ਪੇਸ਼ਕਸ਼ ਕਰਦਾ ਹੈ।
- ਨਾਮਵਰ ਕਲਾਕਾਰਾਂ ਨੂੰ ਪੁਰਸਕਾਰ ਅਤੇ ਫੈਲੋਸ਼ਿਪ ਪ੍ਰਦਾਨ ਕਰਦਾ ਹੈ।

ਹੇਠਾਂ ਦਿੱਤੇ ਵਿਕਲਪਾਂ ਵਿੱਚੋਂ ਸਹੀ ਉੱਤਰ ਦੀ ਚੋਣ ਕਰੋ:

- ਸਿਰਫ A, B ਅਤੇ D
- ਸਿਰਫ B, D ਅਤੇ E
- ਸਿਰਫ B, C ਅਤੇ E
- ਸਿਰਫ C, D ਅਤੇ E

#### Options :

485584134537. 1  
485584134538. 2  
485584134539. 3  
485584134540. 4

## Music

Section Id :	485584863
Section Number :	2
Section type :	Online
Mandatory or Optional :	Optional
Number of Questions :	25
Number of Questions to be attempted :	20
Section Marks :	100
Enable Mark as Answered Mark for Review and Clear Response :	Yes
Maximum Instruction Time :	0
Sub-Section Number :	1
Sub-Section Id :	4855842438
Question Shuffling Allowed :	Yes
Is Section Default? :	null

Question Number : 271 Question Id : 48558433636 Question Type : MCQ Option Shuffling : No Is Question Mandatory : No Calculator : None Response Time : N.A Think Time : N.A Minimum Instruction Time : 0

Correct Marks : 5 Wrong Marks : 1

Question Key Details :

Key	Value
Comprehension	MCQ1

Writer of our National Anthem -

1. Bankim Chandra Chatterjee
2. Mohammad Iqbal
3. Rabindranath Tagore
4. V. N. Bhatkhande

Options :

485584134541. 1  
485584134542. 2  
485584134543. 3  
485584134544. 4

Question Number : 271 Question Id : 48558433636 Question Type : MCQ Option Shuffling : No Is Question Mandatory : No Calculator : None Response Time : N.A Think Time : N.A Minimum Instruction Time : 0

Correct Marks : 5 Wrong Marks : 1

Question Key Details :

Key	Value
Comprehension	MCQ1

ਸਾਡੇ ਰਾਸ਼ਟਰੀ ਗਾਨ ਦੇ ਰਚੇਤਾ / ਲੇਖਕ ?

1. ਬੰਕਿਮ ਚੰਦਰ ਚੈਟਰਜੀ
2. ਮੁਹੰਮਦ ਇਕਬਾਲ
3. ਰਵਿੰਦਰ ਨਾਥ ਟੈਗੋਰ
4. ਵੀ. ਐਨ. ਭਟਖੰਡੇ

Options :

485584134541. 1  
485584134542. 2  
485584134543. 3  
485584134544. 4

Question Number : 272 Question Id : 48558433637 Question Type : MCQ Option Shuffling : No Is Question Mandatory : No Calculator : None Response Time : N.A Think Time : N.A Minimum Instruction Time : 0

Correct Marks : 5 Wrong Marks : 1

Question Key Details :

Key	Value
Comprehension	MCQ1

While singing Raga Malkauns, the first string of the Tanpura is tuned in:

1. Nishad
2. Madhyam
3. Shadaj
4. Pancham

**Options :**

485584134545. 1  
485584134546. 2  
485584134547. 3  
485584134548. 4

**Question Number : 272 Question Id : 48558433637 Question Type : MCQ Option Shuffling : No Is Question Mandatory : No Calculator : None Response Time : N.A Think Time : N.A Minimum Instruction Time : 0**

**Correct Marks : 5 Wrong Marks : 1**

**Question Key Details :**

Key	Value
Comprehension	MCQ1

ਰਾਗ ਮਾਲਕੋਸ਼ ਗਾਂਦੇ ਸਮੇਂ, ਤਾਨਪੁਰਾ ਦੀ ਪਹਿਲੀ ਤਾਰ ਸੁਰ ਮੇਲਦੀ ਹੈ

1. ਨਿਸ਼ਾਦ
2. ਮੱਧਅਮ
3. ਸ਼ੇਡੇਜ਼
4. ਪੰਚਮ

**Options :**

485584134545. 1  
485584134546. 2  
485584134547. 3  
485584134548. 4

**Question Number : 273 Question Id : 48558433638 Question Type : MCQ Option Shuffling : No Is Question Mandatory : No Calculator : None Response Time : N.A Think Time : N.A Minimum Instruction Time : 0**

**Correct Marks : 5 Wrong Marks : 1**

**Question Key Details :**

Key	Value
Comprehension	MCQ1

Kramik Pustak Malika is written by

1. Pt. V. D. Paluskar
2. Pt. Omkar Nath Thakur
3. Ravindranath Tagore
4. Pt. V. N. Bhatkhande

**Options :**

485584134549. 1  
485584134550. 2  
485584134551. 3  
485584134552. 4

**Question Number : 273 Question Id : 48558433638 Question Type : MCQ Option Shuffling : No Is Question Mandatory : No Calculator : None Response Time : N.A Think Time : N.A Minimum Instruction Time : 0**

**Correct Marks : 5 Wrong Marks : 1**

**Question Key Details :**

Key	Value
Comprehension	MCQ1

ਕ੍ਰਮਿਕ ਪੁਸਤਕ ਮਲਿਕਾ ਦੁਆਰਾ ਲਿਖੀ ਗਈ?

1. ਪੰਡਿਤ ਵੀ. ਡੀ. ਪਲੁਸਕਰ
2. ਪੰਡਿਤ ਉਕਾਰ ਨਾਥ ਠਾਕੁਰ
3. ਰਵਿੰਦਰ ਨਾਥ ਟੈਗੋਰ
4. ਪੰਡਿਤ ਵੀ. ਐਨ. ਭਟਖੰਡੇ

**Options :**

485584134549. 1  
485584134550. 2  
485584134551. 3  
485584134552. 4

**Question Number : 274 Question Id : 48558433639 Question Type : MCQ Option Shuffling : No Is Question Mandatory : No Calculator : None Response Time : N.A Think Time : N.A Minimum Instruction Time : 0**

**Correct Marks : 5 Wrong Marks : 1**

**Question Key Details :**

Key	Value
Comprehension	MCQ1

Shadav - Audav Jati has:

1. 6 Swaras in Aroha and 7 Swaras in Avaroha
2. 6 Swaras in Aroha and 5 Swaras in Avaroha
3. 6 Swaras in Aroha and 6 Swaras in Avaroha
4. 5 Swaras in Aroha and 6 Swaras in Avaroha

**Options :**

485584134553. 1  
485584134554. 2  
485584134555. 3  
485584134556. 4

**Question Number : 274 Question Id : 48558433639 Question Type : MCQ Option Shuffling : No Is Question Mandatory : No Calculator : None Response Time : N.A Think Time : N.A Minimum Instruction Time : 0**

**Correct Marks : 5 Wrong Marks : 1**

**Question Key Details :**

Key	Value
Comprehension	MCQ1

ਸਹਦੇਵ - ਅੰਦੇਵ ਜਤੀ ਵਿੱਚ ਹੁੰਦਾ ਹੈ?

1. 6 ਸ੍ਰਾਰ ਆਰੋਹ ਵਿੱਚ ਅਤੇ 7 ਸ੍ਰਾਰ ਅਵਰੋਹ ਵਿੱਚ
2. 6 ਸ੍ਰਾਰ ਆਰੋਹ ਵਿੱਚ ਅਤੇ 5 ਸ੍ਰਾਰ ਅਵਰੋਹ ਵਿੱਚ
3. 6 ਸ੍ਰਾਰ ਆਰੋਹ ਵਿੱਚ ਅਤੇ 6 ਸ੍ਰਾਰ ਅਵਰੋਹ ਵਿੱਚ
4. 5 ਸ੍ਰਾਰ ਆਰੋਹ ਵਿੱਚ ਅਤੇ 6 ਸ੍ਰਾਰ ਅਵਰੋਹ ਵਿੱਚ

**Options :**

485584134553. 1  
485584134554. 2  
485584134555. 3  
485584134556. 4

**Question Number : 275 Question Id : 48558433640 Question Type : MCQ Option Shuffling : No Is Question Mandatory : No Calculator : None Response Time : N.A Think Time : N.A Minimum Instruction Time : 0**

**Correct Marks : 5 Wrong Marks : 1**

**Question Key Details :**

Key	Value
Comprehension	MCQ1

It is also called 'Sparsh' Swara :

1. Alankar
2. Vadi
3. Kan
4. Khatka

**Options :**

485584134557. 1  
485584134558. 2  
485584134559. 3  
485584134560. 4

**Question Number : 275 Question Id : 48558433640 Question Type : MCQ Option Shuffling : No Is Question Mandatory : No Calculator : None Response Time : N.A Think Time : N.A Minimum Instruction Time : 0**

**Correct Marks : 5 Wrong Marks : 1**

**Question Key Details :**

Key	Value
Comprehension	MCQ1

ਇਹ ਸਪਰਸ਼ ਸ੍ਵਰ ਵੀ ਕਹਿਲਾਉਂਦਾ ਹੈ?

1. ਅਲੰਕਾਰ
2. ਵਾਦੀ
3. ਕਣ
4. ਖਤਕਾ

**Options :**

485584134557. 1  
485584134558. 2  
485584134559. 3  
485584134560. 4

**Question Number : 276 Question Id : 48558433641 Question Type : MCQ Option Shuffling : No Is Question Mandatory : No Calculator : None Response Time : N.A Think Time : N.A Minimum Instruction Time : 0**

**Correct Marks : 5 Wrong Marks : 1**

**Question Key Details :**

Key	Value
Comprehension	MCQ1



The first beat (Matra) of the Tala is called:

1. Khali
2. Avartan
3. Tali
4. Sam

**Options :**

485584134561. 1  
485584134562. 2  
485584134563. 3  
485584134564. 4

**Question Number : 276 Question Id : 48558433641 Question Type : MCQ Option Shuffling : No Is Question Mandatory : No Calculator : None Response Time : N.A Think Time : N.A Minimum Instruction Time : 0**

**Correct Marks : 5 Wrong Marks : 1**

**Question Key Details :**

Key	Value
Comprehension	MCQ1

ਤਾਲ ਦੀ ਪਹਿਲੀ ਮਾਤਰਾ / ਬੀਤ / ਤਾਲ ਕਹਿਲਾਉਂਦੀ ਹੈ?

1. ਖਾਲੀ
2. ਅਵਰਤਨ
3. ਤਾਲੀ
4. ਸਮ

**Options :**

485584134561. 1  
485584134562. 2  
485584134563. 3  
485584134564. 4

**Question Number : 277 Question Id : 48558433642 Question Type : MCQ Option Shuffling : No Is Question Mandatory : No Calculator : None Response Time : N.A Think Time : N.A Minimum Instruction Time : 0**

**Correct Marks : 5 Wrong Marks : 1**

**Question Key Details :**

Key	Value
Comprehension	MCQ1

A set of notes to identify a Raga is called:

1. Aroha
2. Avaroha
3. Alap
4. Pakad

**Options :**

485584134565. 1  
485584134566. 2  
485584134567. 3  
485584134568. 4

**Question Number : 277 Question Id : 48558433642 Question Type : MCQ Option Shuffling : No Is Question Mandatory : No Calculator : None Response Time : N.A Think Time : N.A Minimum Instruction Time : 0**

**Correct Marks : 5 Wrong Marks : 1**

**Question Key Details :**

Key	Value
Comprehension	MCQ1

ਰਾਗ ਦੀ ਪਛਾਣ ਕਰਨ ਲਈ ਨੋਟਸ ਦੇ ਸੈਟ ਨੂੰ ਕਿਹਾ ਜਾਂਦਾ ਹੈ?

1. ਆਰੋਹ
2. ਅਵਰੋਹ
3. ਆਲਾਪ
4. ਪਕੜ

**Options :**

485584134565. 1  
485584134566. 2  
485584134567. 3  
485584134568. 4

**Question Number : 278 Question Id : 48558433643 Question Type : MCQ Option Shuffling : No Is Question Mandatory : No Calculator : None Response Time : N.A Think Time : N.A Minimum Instruction Time : 0**

**Correct Marks : 5 Wrong Marks : 1**

**Question Key Details :**

Key	Value
Comprehension	MCQ1

Elaboration of notes of a Raga in slow tempo is known as:

1. Gram
2. Murchhana
3. Tana
4. Alap

**Options :**

485584134569. 1  
485584134570. 2  
485584134571. 3  
485584134572. 4

**Question Number : 278 Question Id : 48558433643 Question Type : MCQ Option Shuffling : No Is Question Mandatory : No Calculator : None Response Time : N.A Think Time : N.A Minimum Instruction Time : 0**

**Correct Marks : 5 Wrong Marks : 1**

**Question Key Details :**

Key	Value
Comprehension	MCQ1

ਇੱਕ ਰਾਗ ਦੇ ਨੋਟਸ ਦਾ ਵਿਸਥਾਰ ਹੌਲੀ ਟੈਂਪੋ ( ਸਿਰ ) ਹਟੀ ਵਜੋਂ ਜਾਣਿਆ ਜਾਂਦਾ ਹੈ?

1. ਗਰਾਮ
2. ਮੁਰਛਨਾ
3. ਤਾਨ
4. ਆਲਾਪ

**Options :**

485584134569. 1  
485584134570. 2  
485584134571. 3  
485584134572. 4

**Question Number : 279 Question Id : 48558433644 Question Type : MCQ Option Shuffling : No Is Question Mandatory : No Calculator : None Response Time : N.A Think Time : N.A Minimum Instruction Time : 0**

**Correct Marks : 5 Wrong Marks : 1**

**Question Key Details :**

Key	Value
Comprehension	MCQ1

Mushtaq Ali Khan belonged to:

1. Jaipur Gharana
2. Senia Gharana
3. Kirana Gharana
4. Agra Gharana

**Options :**

485584134573. 1  
485584134574. 2  
485584134575. 3  
485584134576. 4

**Question Number : 279 Question Id : 48558433644 Question Type : MCQ Option Shuffling : No Is Question Mandatory : No Calculator : None Response Time : N.A Think Time : N.A Minimum Instruction Time : 0**

**Correct Marks : 5 Wrong Marks : 1**

**Question Key Details :**

Key	Value
Comprehension	MCQ1

ਮੁਸ਼ਤਾਕ ਅਲੀ ਖਾਨ ਸੰਬੰਧਿਤ ਹੈ?

1. ਜੈਪੁਰ ਘਰਾਨਾ
2. ਸੇਨਿਆ ਘਰਾਨਾ
3. ਕਿਰਾਨਾ ਘਰਾਨਾ
4. ਆਰਾਗ ਘਰਾਨਾ

**Options :**

485584134573. 1  
485584134574. 2  
485584134575. 3  
485584134576. 4

**Question Number : 280 Question Id : 48558433645 Question Type : MCQ Option Shuffling : No Is Question Mandatory : No Calculator : None Response Time : N.A Think Time : N.A Minimum Instruction Time : 0**

**Correct Marks : 5 Wrong Marks : 1**

**Question Key Details :**

Key	Value
Comprehension	MCQ1

Tala played with Maseetkhani Gat is:

1. Ektala
2. Teentala
3. Sooltala
4. Keharwa

**Options :**

485584134577. 1  
485584134578. 2  
485584134579. 3  
485584134580. 4

**Question Number : 280 Question Id : 48558433645 Question Type : MCQ Option Shuffling : No Is Question Mandatory : No Calculator : None Response Time : N.A Think Time : N.A Minimum Instruction Time : 0**

**Correct Marks : 5 Wrong Marks : 1**

**Question Key Details :**

Key	Value
Comprehension	MCQ1

ਤਾਲ ਮਸੀਤਖਾਨੀ ਗਟ ਨਾਲ ਵਜਾਇਆ / ਖੇਡਿਆ ਜਾਂਦਾ ਹੈ?

1. ਇਕਤਾਲ
2. ਤੀਨਤਾਲ
3. ਸੁਲਤਾਲ
4. ਕੈਰਵਾ

**Options :**

485584134577. 1  
485584134578. 2  
485584134579. 3  
485584134580. 4

**Question Number : 281 Question Id : 48558433646 Question Type : MCQ Option Shuffling : No Is Question Mandatory : No Calculator : None Response Time : N.A Think Time : N.A Minimum Instruction Time : 0**

**Correct Marks : 5 Wrong Marks : 1**

**Question Key Details :**

Key	Value
Comprehension	MCQ1

The first half of the Saptak is called:

1. Uttarang
2. Purvang
3. Aroha
4. Avaroha

**Options :**

485584134581. 1  
485584134582. 2  
485584134583. 3  
485584134584. 4

**Question Number : 281 Question Id : 48558433646 Question Type : MCQ Option Shuffling : No Is Question Mandatory : No Calculator : None Response Time : N.A Think Time : N.A Minimum Instruction Time : 0**

**Correct Marks : 5 Wrong Marks : 1**

**Question Key Details :**

Key	Value
Comprehension	MCQ1

ਸਪਤਕ ਦਾ ਪਹਿਲਾ ਅੱਧ ਕਹਿਲਾਉਂਦਾ ਹੈ?

1. ਉਤਰੰਗ
2. ਪੁਰਵੰਗ
3. ਆਰੋਹ
4. ਅਵਰੋਹ

**Options :**

485584134581. 1  
485584134582. 2  
485584134583. 3  
485584134584. 4

**Question Number : 282 Question Id : 48558433647 Question Type : MCQ Option Shuffling : No Is Question Mandatory : No Calculator : None Response Time : N.A Think Time : N.A Minimum Instruction Time : 0**

**Correct Marks : 5 Wrong Marks : 1**

**Question Key Details :**

Key	Value
Comprehension	MCQ1

Mention the tala with anga's Drutam + Laghu

1. Adi tala
2. Roopaka tala
3. Chapu tala
4. Tripata tala

**Options :**

485584134585. 1  
485584134586. 2  
485584134587. 3  
485584134588. 4

**Question Number : 282 Question Id : 48558433647 Question Type : MCQ Option Shuffling : No Is Question Mandatory : No Calculator : None Response Time : N.A Think Time : N.A Minimum Instruction Time : 0**

**Correct Marks : 5 Wrong Marks : 1**

**Question Key Details :**

Key	Value
Comprehension	MCQ1

ਤਾਲ ਦੇ ਅੰਗਾਂ ਦਾ ਦ੍ਰੁਤਮ + ਲਘੂ ਦਾ ਜ਼ਿਕਰ ਕਰੋ ?

1. ਆਦਿ ਤਾਲ
2. ਰੂਪਕ ਤਾਲ
3. ਚਪੂ ਤਾਲ
4. ਤ੍ਰਿਪਤਾ ਤਾਲ

**Options :**

485584134585. 1  
485584134586. 2  
485584134587. 3  
485584134588. 4

**Question Number : 283 Question Id : 48558433648 Question Type : MCQ Option Shuffling : No Is Question Mandatory : No Calculator : None Response Time : N.A Think Time : N.A Minimum Instruction Time : 0**

**Correct Marks : 5 Wrong Marks : 1**

**Question Key Details :**

Key	Value
Comprehension	MCQ1

Laya of Musical composition in fast tempo is known as:

1. Sama laya
2. Drut laya
3. Vilambit laya
4. Madhya laya

**Options :**

485584134589. 1  
485584134590. 2  
485584134591. 3  
485584134592. 4

**Question Number : 283 Question Id : 48558433648 Question Type : MCQ Option Shuffling : No Is Question Mandatory : No Calculator : None Response Time : N.A Think Time : N.A Minimum Instruction Time : 0**

**Correct Marks : 5 Wrong Marks : 1**

**Question Key Details :**

Key	Value
Comprehension	MCQ1

ਤੇਜ਼ ਟੈਂਪੋ / ਸੁਰ / ਤਾਲ ਵਿੱਚ ਸੰਗੀਤਕ ਰਚਨਾ ਦੀ ਲੈਅ ਨੂੰ ਕਿਹਾ ਜਾਂਦਾ ਹੈ?

1. ਸਮ ਲੈਅ
2. ਡ੍ਰੁਟ ਲੈਅ
3. ਵਿਲੰਬਿਤ ਲੈਅ
4. ਮੱਧ ਲੈਅ

**Options :**

485584134589. 1  
485584134590. 2  
485584134591. 3  
485584134592. 4

**Question Number : 284 Question Id : 48558433649 Question Type : MCQ Option Shuffling : No Is Question Mandatory : No Calculator : None Response Time : N.A Think Time : N.A Minimum Instruction Time : 0**

**Correct Marks : 5 Wrong Marks : 1**

**Question Key Details :**

Key	Value
Comprehension	MCQ1



What is the original name of Purandaradas?

1. Venkatesa
2. Shreenivasa
3. Sreedhara
4. Vasudeva

**Options :**

485584134593. 1  
485584134594. 2  
485584134595. 3  
485584134596. 4

**Question Number : 284 Question Id : 48558433649 Question Type : MCQ Option Shuffling : No Is Question Mandatory : No Calculator : None Response Time : N.A Think Time : N.A Minimum Instruction Time : 0**

**Correct Marks : 5 Wrong Marks : 1**

**Question Key Details :**

Key	Value
Comprehension	MCQ1

ਪੁਰਨਦੇਵਦਾਸ ਦਾ ਮੌਲਿਕ / ਪ੍ਰਥਮ ਨਾਮ ਹੈ?

1. ਵੇਂਕਾਤੇਸਾ
2. ਸ਼੍ਰੀਨਿਵਾਸ
3. ਸ਼੍ਰੀ ਧਾਵਾ
4. ਵਾਸੁਦੇਵਾ

**Options :**

485584134593. 1  
485584134594. 2  
485584134595. 3  
485584134596. 4

**Question Number : 285 Question Id : 48558433650 Question Type : MCQ Option Shuffling : No Is Question Mandatory : No Calculator : None Response Time : N.A Think Time : N.A Minimum Instruction Time : 0**

**Correct Marks : 5 Wrong Marks : 1**

**Question Key Details :**

Key	Value
Comprehension	MCQ1

Select the tala which has 7 Aksharakalas/Matra

1. Roopakam / Dadra
2. Adi Tala / Teental
3. Chaputala / Roopak
4. Jhampa Tala / Jhaptal

**Options :**

485584134597. 1  
485584134598. 2  
485584134599. 3  
485584134600. 4

**Question Number : 285 Question Id : 48558433650 Question Type : MCQ Option Shuffling : No Is Question Mandatory : No Calculator : None Response Time : N.A Think Time : N.A Minimum Instruction Time : 0**

**Correct Marks : 5 Wrong Marks : 1**

**Question Key Details :**

Key	Value
Comprehension	MCQ1

ਤਾਲ ਨੂੰ ਛਾਂਟੋ ਜਿਸ ਵਿੱਚ 7 ਅਕਸ਼ਰਾਕਾਲਸ / ਮਾਤਰਾ ਹਨ?

1. ਰੂਪਕਮ / ਦਾਦਰਾ
2. ਆਦਿ / ਤੀਨਤਾਲ
3. ਚਪੁਤਲਾ / ਰੂਪਕ
4. ਝਾਂਪਤਲਾ / ਝਪਤਾਲ

**Options :**

485584134597. 1  
485584134598. 2  
485584134599. 3  
485584134600. 4

**Question Number : 286 Question Id : 48558433651 Question Type : MCQ Option Shuffling : No Is Question Mandatory : No Calculator : None Response Time : N.A Think Time : N.A Minimum Instruction Time : 0**

**Correct Marks : 5 Wrong Marks : 1**

**Question Key Details :**

Key	Value
Comprehension	MCQ1

Select the Audava raga from the following:

1. Shankarabharanam
2. Kalyani
3. Sri Ranjani
4. Hindolam

**Options :**

485584134601. 1  
485584134602. 2  
485584134603. 3  
485584134604. 4

**Question Number : 286 Question Id : 48558433651 Question Type : MCQ Option Shuffling : No Is Question Mandatory : No Calculator : None Response Time : N.A Think Time : N.A Minimum Instruction Time : 0**

**Correct Marks : 5 Wrong Marks : 1**

**Question Key Details :**

Key	Value
Comprehension	MCQ1

ਹੇਠ ਲਿਖਿਆਂ ਵਿੱਚੋਂ ਔਦਵਾ ਰਾਗ ਚੁਣੋ?

1. ਸ਼ੰਕਰਾਭਰਨਮ
2. ਕਲਿਆਣੀ
3. ਸ੍ਰੀ ਰੰਜਨੀ
4. ਹਿੰਡੋਲਮ

**Options :**

485584134601. 1  
485584134602. 2  
485584134603. 3  
485584134604. 4

**Question Number : 287 Question Id : 48558433652 Question Type : MCQ Option Shuffling : No Is Question Mandatory : No Calculator : None Response Time : N.A Think Time : N.A Minimum Instruction Time : 0**

**Correct Marks : 5 Wrong Marks : 1**

**Question Key Details :**

Key	Value
Comprehension	MCQ1

The sound emanating from the stringed instruments is known as:

1. Shareeraja
2. Lohaja
3. Charmaja
4. Vayuja

**Options :**

485584134605. 1  
485584134606. 2  
485584134607. 3  
485584134608. 4

**Question Number : 287 Question Id : 48558433652 Question Type : MCQ Option Shuffling : No Is Question Mandatory : No Calculator : None Response Time : N.A Think Time : N.A Minimum Instruction Time : 0**

**Correct Marks : 5 Wrong Marks : 1**

**Question Key Details :**

Key	Value
Comprehension	MCQ1

ਅਸਬੰਧ ਉਪਕਰਣਾਂ ਤੋਂ ਉਤਪੰਨ ਆਵਾਜ਼ਾਂ ਨੂੰ ਜਾਣਿਆ ਜਾਂਦਾ ਹੈ?

1. ਸ਼੍ਰੀ ਰਾਜਾ
2. ਲੋਹਾਜਾ
3. ਚਾਰਮਾਜਾ
4. ਵਾਯੂਜਾ

**Options :**

485584134605. 1  
485584134606. 2  
485584134607. 3  
485584134608. 4

**Question Number : 288 Question Id : 48558433653 Question Type : MCQ Option Shuffling : No Is Question Mandatory : No Calculator : None Response Time : N.A Think Time : N.A Minimum Instruction Time : 0**

**Correct Marks : 5 Wrong Marks : 1**

**Question Key Details :**

Key	Value
Comprehension	MCQ1

A musical form which needs high creative ability:

1. Kriti
2. Padam
3. Pallavi
4. Tillana

**Options :**

485584134609. 1  
485584134610. 2  
485584134611. 3  
485584134612. 4

**Question Number : 288 Question Id : 48558433653 Question Type : MCQ Option Shuffling : No Is Question Mandatory : No Calculator : None Response Time : N.A Think Time : N.A Minimum Instruction Time : 0**

**Correct Marks : 5 Wrong Marks : 1**

**Question Key Details :**

Key	Value
Comprehension	MCQ1

ਸੰਗੀਤਕ ਰੂਪ ਜਿਸਨੂੰ ਉੱਚ ਰਚਨਾਤਮਕ ਯੋਗਤਾ ਦੀ ਲੋੜ ਹੁੰਦੀ ਹੈ?

1. ਕ੍ਰਿਤੀ
2. ਪਦਮ
3. ਪਲਵੀ
4. ਤਿਲਾਨਾ

**Options :**

485584134609. 1  
485584134610. 2  
485584134611. 3  
485584134612. 4

**Question Number : 289 Question Id : 48558433654 Question Type : MCQ Option Shuffling : No Is Question Mandatory : No Calculator : None Response Time : N.A Think Time : N.A Minimum Instruction Time : 0**

**Correct Marks : 5 Wrong Marks : 1**

**Question Key Details :**

Key	Value
Comprehension	MCQ1

Sa Re Ga Ma Pa Dha Ni swaras belong to:

1. Bhairavi Thata
2. Kafi Thata
3. Asavari Thata
4. Khamaj Thata

**Options :**

485584134613. 1  
485584134614. 2  
485584134615. 3  
485584134616. 4

**Question Number : 289 Question Id : 48558433654 Question Type : MCQ Option Shuffling : No Is Question Mandatory : No Calculator : None Response Time : N.A Think Time : N.A Minimum Instruction Time : 0**

**Correct Marks : 5 Wrong Marks : 1**

**Question Key Details :**

Key	Value
Comprehension	MCQ1

ਸਾ ਰੇ ਗਾ ਮਾ ਪਾ ਧਾ ਨੀ ਸ਼੍ਰੀ ਸੰਬੰਧਿਤ ਹਨ?

1. ਭੈਰਵੀ ਥਾਟਾ
2. ਕਾਫੀ ਥਾਟਾ
3. ਅਸਵਰੀ ਥਾਟਾ
4. ਥਾਮਜ ਥਾਟਾ

**Options :**

485584134613. 1  
485584134614. 2  
485584134615. 3  
485584134616. 4

**Question Number : 290 Question Id : 48558433655 Question Type : MCQ Option Shuffling : No Is Question Mandatory : No Calculator : None Response Time : N.A Think Time : N.A Minimum Instruction Time : 0**

**Correct Marks : 5 Wrong Marks : 1**

**Question Key Details :**

Key	Value
Comprehension	MCQ1

Select two 'THATA' / MELA from the following:

- A. Kalyan / Kalyani
- B. Malkauns / Hindolam
- C. Bhupali / Mohanam
- D. Bhairav / Mayamalavganla
- E. Bageshree / Sriranjani

Choose the correct answer from the options given below:

- 1. A and B only
- 2. B and C only
- 3. A and D only
- 4. B and E only

**Options :**

- 485584134617. 1
- 485584134618. 2
- 485584134619. 3
- 485584134620. 4

**Question Number : 290 Question Id : 48558433655 Question Type : MCQ Option Shuffling : No Is Question Mandatory : No Calculator : None Response Time : N.A Think Time : N.A Minimum Instruction Time : 0**

**Correct Marks : 5 Wrong Marks : 1**

**Question Key Details :**

Key	Value
Comprehension	MCQ1

ਹੇਠ ਲਿਖਿਆਂ ਵਿੱਚੋਂ ਦੋ "ਥਾਟ / ਮੇਲਾ" ਛਾਂਟੋ / ਚੁਣੋ?

- A. ਕਲਿਆਣ / ਕਲਿਆਣੀ
- B. ਮਾਲਕੋਸ / ਹਿੰਡੋਲਮ
- C. ਭੂਪਾਲੀ / ਮੋਹਨਮ
- D. ਭੈਰਵ / ਮਾਇਆਮਾਲਾਵਗੋਨਲਾ
- E. ਬਾਗੋਸ਼੍ਰੀ / ਸ਼੍ਰੀਰੰਜਨੀ

ਹੇਠਾਂ ਦਿੱਤੇ ਵਿਕਲਪਾਂ ਵਿੱਚੋਂ ਸਹੀ ਉੱਤਰ ਚੁਣੋ:

- 1. ਸਿਰਫ਼ A ਅਤੇ B
- 2. ਸਿਰਫ਼ B ਅਤੇ C
- 3. ਸਿਰਫ਼ A ਅਤੇ D
- 4. ਸਿਰਫ਼ B ਅਤੇ E

**Options :**

- 485584134617. 1
- 485584134618. 2
- 485584134619. 3
- 485584134620. 4

**Question Number : 291 Question Id : 48558433656 Question Type : MCQ Option Shuffling : No Is Question Mandatory : No Calculator : None Response Time : N.A Think Time : N.A Minimum Instruction Time : 0**

**Correct Marks : 5 Wrong Marks : 1**

**Question Key Details :**

Key	Value
Comprehension	MCQ1

Three qualities of Nad are:

- A. Swara
- B. Pitch
- C. Intensity
- D. Alankar
- E. Timbre

Choose the correct answer from the options given below:

1. A, B and C only
2. B, C and E only
3. A, D and E only
4. B, C and D only

**Options :**

- 485584134621. 1
- 485584134622. 2
- 485584134623. 3
- 485584134624. 4

**Question Number : 291 Question Id : 48558433656 Question Type : MCQ Option Shuffling : No Is Question Mandatory : No Calculator : None Response Time : N.A Think Time : N.A Minimum Instruction Time : 0**

**Correct Marks : 5 Wrong Marks : 1**

**Question Key Details :**

Key	Value
Comprehension	MCQ1



ਨਾਦ ਦੀਆਂ ਤਿੰਨ ਵਿਸ਼ੇਸ਼ਤਾਵਾਂ / ਗੁਣ ਹਨ?

- A. ਸ਼੍ਰੀ
- B. ਪਿਚ / ਸਵਰਮਾਨ
- C. ਤੀਬਰਤਾ
- D. ਅਲੰਕਾਰ
- E. ਧੁਨੀ ਗੁਣ

ਹੇਠਾਂ ਦਿੱਤੇ ਵਿਕਲਪਾਂ ਵਿੱਚੋਂ ਸਹੀ ਉੱਤਰ ਚੁਣੋ:

1. ਸਿਰਫ਼ A, B ਅਤੇ C
2. ਸਿਰਫ਼ B, C ਅਤੇ E
3. ਸਿਰਫ਼ A, D ਅਤੇ E
4. ਸਿਰਫ਼ B, C ਅਤੇ D

**Options :**

- 485584134621. 1
- 485584134622. 2
- 485584134623. 3
- 485584134624. 4

**Question Number : 292 Question Id : 48558433657 Question Type : MCQ Option Shuffling : No Is Question Mandatory : No Calculator : None Response Time : N.A Think Time : N.A Minimum Instruction Time : 0**

**Correct Marks : 5 Wrong Marks : 1**

**Question Key Details :**

Key	Value
Comprehension	MCQ1

Match List I with List II

LIST I		LIST II	
A.	Vilambit Khayal	I.	Tillana
B.	Tarana	II.	Kriti
C.	Thumri	III.	Maseetkhani Gat
D.	Khayal	IV.	Padam

Choose the correct answer from the options given below:

1. A-I, B-III, C-II, D-IV
2. A-II, B-I, C-IV, D-III
3. A-III, B-I, C-IV, D-II
4. A-IV, B-II, C-I, D-III

**Options :**

- 485584134625. 1
- 485584134626. 2
- 485584134627. 3
- 485584134628. 4

Question Number : 292 Question Id : 48558433657 Question Type : MCQ Option Shuffling : No Is Question Mandatory : No Calculator : None Response Time : N.A Think Time : N.A Minimum Instruction Time : 0

Correct Marks : 5 Wrong Marks : 1

Question Key Details :

Key	Value
Comprehension	MCQ1

ਸੂਚੀ I ਦਾ ਸੂਚੀ II ਨਾਲ ਮਿਲਾਣ ਕਰੋ:

ਸੂਚੀ I		ਸੂਚੀ II	
A.	ਵਿਲੰਬਿਤ ਖਿਆਲ	I.	ਤਿਲਾਨਾ
B.	ਤਰਾਨਾ	II.	ਕਿਤੀ
C.	ਤਰਾਨਾ	III.	ਮਸਿਤਖਾਨੀ ਗਤ
D.	Khayal	IV.	ਪਦਮ

ਹੇਠਾਂ ਦਿੱਤੇ ਵਿਕਲਪਾਂ ਵਿੱਚੋਂ ਸਹੀ ਉੱਤਰ ਚੁਣੋ:

1. A-I, B-III, C-II, D-IV
2. A-II, B-I, C-IV, D-III
3. A-III, B-I, C-IV, D-II
4. A-IV, B-II, C-I, D-III

Options :

485584134625. 1  
485584134626. 2  
485584134627. 3  
485584134628. 4

Question Number : 293 Question Id : 48558433658 Question Type : MCQ Option Shuffling : No Is Question Mandatory : No Calculator : None Response Time : N.A Think Time : N.A Minimum Instruction Time : 0

Correct Marks : 5 Wrong Marks : 1

Question Key Details :

Key	Value
Comprehension	MCQ1

Match List I with List II

LIST I		LIST II	
A.	Nada	I.	Avroha
B.	Shruti	II.	Vivadi
C.	Swara	III.	Pramana
D.	Scale	IV.	Ahata

Choose the correct answer from the options given below:

1. A-I, B-II, C-III, D-IV
2. A-II, B-III, C-IV, D-I
3. A-III, B-IV, C-I, D-II
4. A-IV, B-III, C-II, D-I

**Options :**

485584134629. 1  
485584134630. 2  
485584134631. 3  
485584134632. 4

**Question Number : 293 Question Id : 48558433658 Question Type : MCQ Option Shuffling : No Is Question Mandatory : No Calculator : None Response Time : N.A Think Time : N.A Minimum Instruction Time : 0**

**Correct Marks : 5 Wrong Marks : 1**

**Question Key Details :**

Key	Value
Comprehension	MCQ1

ਸੂਚੀ I ਦਾ ਸੂਚੀ II ਨਾਲ ਮਿਲਾਣ ਕਰੋ:

ਸੂਚੀ I		ਸੂਚੀ II	
A.	ਨਾਦ	I.	ਅਵਰੋਹ
B.	ਸ਼ਰੁਤੀ	II.	ਵਿਵਾਦੀ
C.	ਸ੍ਵਰ	III.	ਪ੍ਰਮਾਣ
D.	ਸੀਲ	IV.	ਅਹਾਤਾ

ਹੇਠਾਂ ਦਿੱਤੇ ਵਿਕਲਪਾਂ ਵਿੱਚੋਂ ਸਹੀ ਉੱਤਰ ਚੁਣੋ:

1. A-I, B-II, C-III, D-IV
2. A-II, B-III, C-IV, D-I
3. A-III, B-IV, C-I, D-II
4. A-IV, B-III, C-II, D-I

**Options :**

485584134629. 1  
485584134630. 2  
485584134631. 3  
485584134632. 4

**Question Number : 294 Question Id : 48558433659 Question Type : MCQ Option Shuffling : No Is Question Mandatory : No Calculator : None Response Time : N.A Think Time : N.A Minimum Instruction Time : 0**

**Correct Marks : 5 Wrong Marks : 1**

**Question Key Details :**

Key	Value
Comprehension	MCQ1

Arrange the Talas according to their ascending order of Matras:

- A. Ektala
- B. Keharwa
- C. Dadra
- D. Jhaptala
- E. Teentala

Choose the correct answer from the options given below:

- 1. A, B, C, D, E
- 2. A, C, B, D, E
- 3. C, B, D, A, E
- 4. C, B, A, D, E

**Options :**

- 485584134633. 1
- 485584134634. 2
- 485584134635. 3
- 485584134636. 4

**Question Number : 294 Question Id : 48558433659 Question Type : MCQ Option Shuffling : No Is Question Mandatory : No Calculator : None Response Time : N.A Think Time : N.A Minimum Instruction Time : 0**

**Correct Marks : 5 Wrong Marks : 1**

**Question Key Details :**

Key	Value
Comprehension	MCQ1

ਮਾਤਰਾ ਦੇ ਚੜ੍ਹਦੇ ਕ੍ਰਮ ਅਨੁਸਾਰ ਤਾਲ ਦਾ ਪ੍ਰਬੰਧ ਕਰੋ?

- A. ਇਕਤਾਲ
- B. ਕਰਵਾ
- C. ਦਾਦਰਾ
- D. ਝਪਤਾਲ
- E. ਤੀਨਤਾਲ

ਹੇਠਾਂ ਦਿੱਤੇ ਵਿਕਲਪਾਂ ਵਿੱਚੋਂ ਸਹੀ ਉੱਤਰ ਚੁਣੋ:

- 1. A, B, C, D, E
- 2. A, C, B, D, E
- 3. C, B, D, A, E
- 4. C, B, A, D, E

**Options :**

- 485584134633. 1
- 485584134634. 2
- 485584134635. 3
- 485584134636. 4

**Question Number : 295 Question Id : 48558433660 Question Type : MCQ Option Shuffling : No Is Question Mandatory : No Calculator : None Response Time : N.A Think Time : N.A Minimum Instruction Time : 0**

**Correct Marks : 5 Wrong Marks : 1**

**Question Key Details :**

Key	Value
Comprehension	MCQ1

Arrange the swaras of Raga Bhupali / Mohanam according to its Avaroha:

- A. Pa
- B. Re
- C. Ga
- D. Dha
- E. Sa

Choose the correct answer from the options given below:

- 1. A, B, C, E, D
- 2. D, A, C, B, E
- 3. E, B, C, A, D
- 4. E, D, A, C, B

**Options :**

- 485584134637. 1
- 485584134638. 2
- 485584134639. 3
- 485584134640. 4

Question Number : 295 Question Id : 48558433660 Question Type : MCQ Option Shuffling : No Is Question Mandatory : No Calculator : None Response Time : N.A Think Time : N.A Minimum Instruction Time : 0

Correct Marks : 5 Wrong Marks : 1

Question Key Details :

Key	Value
Comprehension	MCQ1

ਰਾਗ ਭੋਪਾਲੀ / ਮੋਹਨਮ ਦੇ ਸ਼ੁਰ ਨੂੰ ਉਨ੍ਹਾਂ ਦੇ ਅਵਰੋਹ ਦੇ ਅਨੁਰੂਪ ਵਿਵਸਥਿਤ ਕਰੋ?

- A. ਪਾ
- B. ਰੇ
- C. ਗਾ
- D. ਧਾ
- E. ਸਾ

ਹੇਠਾਂ ਦਿੱਤੇ ਵਿਕਲਪਾਂ ਵਿੱਚੋਂ ਸਹੀ ਉੱਤਰ ਚੁਣੋ:

1. A, B, C, E, D
2. D, A, C, B, E
3. E, B, C, A, D
4. E, D, A, C, B

Options :

- 485584134637. 1
- 485584134638. 2
- 485584134639. 3
- 485584134640. 4

## Dance

Section Id :	485584864
Section Number :	3
Section type :	Online
Mandatory or Optional :	Optional
Number of Questions :	25
Number of Questions to be attempted :	20
Section Marks :	100
Enable Mark as Answered Mark for Review and Clear Response :	Yes
Maximum Instruction Time :	0
Sub-Section Number :	1
Sub-Section Id :	4855842439
Question Shuffling Allowed :	Yes
Is Section Default? :	null

Question Number : 296 Question Id : 48558433661 Question Type : MCQ Option Shuffling : No Is Question Mandatory : No Calculator : None Response Time : N.A Think Time : N.A Minimum Instruction Time : 0

Correct Marks : 5 Wrong Marks : 1

Question Key Details :

Key	Value
-----	-------

Comprehension	MCQ2
---------------	------

"Uddipan" and "Aalamban" are the types of -

1. Vibhav
2. Anubhav
3. Aangik
4. Vachik

**Options :**

485584134641. 1  
485584134642. 2  
485584134643. 3  
485584134644. 4

**Question Number : 296 Question Id : 48558433661 Question Type : MCQ Option Shuffling : No Is Question Mandatory : No Calculator : None Response Time : N.A Think Time : N.A Minimum Instruction Time : 0**

**Correct Marks : 5 Wrong Marks : 1**

**Question Key Details :**

Key	Value
Comprehension	MCQ2

" ਉਦੀਪਨ " ਅਤੇ ਆਲੰਬਨ ਕਿਸ ਦੇ ਪ੍ਰਕਾਰ ਹਨ?

1. ਵਿਭਵ
2. ਅਨੁਭਵ
3. ਆਂਗਿਕ
4. ਵਾਚਿਕ

**Options :**

485584134641. 1  
485584134642. 2  
485584134643. 3  
485584134644. 4

**Question Number : 297 Question Id : 48558433662 Question Type : MCQ Option Shuffling : No Is Question Mandatory : No Calculator : None Response Time : N.A Think Time : N.A Minimum Instruction Time : 0**

**Correct Marks : 5 Wrong Marks : 1**

**Question Key Details :**

Key	Value
Comprehension	MCQ2

What is the make-up artist's process called who applies cutti or chutti on actor-dancer's face in Kathakali?

1. Kattalan
2. Pitham
3. Chuttikaran
4. Talavattam

**Options :**

485584134645. 1  
485584134646. 2  
485584134647. 3  
485584134648. 4

**Question Number : 297 Question Id : 48558433662 Question Type : MCQ Option Shuffling : No Is Question Mandatory : No Calculator : None Response Time : N.A Think Time : N.A Minimum Instruction Time : 0**

**Correct Marks : 5 Wrong Marks : 1**

**Question Key Details :**

Key	Value
Comprehension	MCQ2

ਮੇਕਅਪ ਆਰਟਿਸਟ ਪ੍ਰਕ੍ਰਿਆ ਨੂੰ ਕੀ ਕਿਹਾ ਜਾਂਦਾ ਹੈ ਜੋ ਕਥਾਕਲੀ ਵਿੱਚ ਨਰਤਕ ਦੇ ਚਿਹਰੇ ਤੇ ਕੁੱਟੀ ਤੇ ਚੁੱਟੀ ਲਾਗੂ ਕਰਦਾ ਹੈ?

1. ਕੱਤਾਲਨ
2. ਪਿਥਮ
3. ਚੁੱਤੀਕਰਨ
4. ਤਲਾਵਤੱਮ

**Options :**

485584134645. 1  
485584134646. 2  
485584134647. 3  
485584134648. 4

**Question Number : 298 Question Id : 48558433663 Question Type : MCQ Option Shuffling : No Is Question Mandatory : No Calculator : None Response Time : N.A Think Time : N.A Minimum Instruction Time : 0**

**Correct Marks : 5 Wrong Marks : 1**

**Question Key Details :**

Key	Value
Comprehension	MCQ2



"Abhinaya Chandrika" text is followed by -

1. Manipuri dancers
2. Odissi dancers
3. Kathakali dancers
4. Kathak dancers

**Options :**

485584134649. 1  
485584134650. 2  
485584134651. 3  
485584134652. 4

**Question Number : 298 Question Id : 48558433663 Question Type : MCQ Option Shuffling : No Is Question Mandatory : No Calculator : None Response Time : N.A Think Time : N.A Minimum Instruction Time : 0**

**Correct Marks : 5 Wrong Marks : 1**

**Question Key Details :**

Key	Value
Comprehension	MCQ2

" ਅਭਿਨੈ ਚੰਦਰਿਕਾ " ਮੂਲ ਕਥਾ ਕਿਸ ਦੁਆਰਾ ਪੈਰੋਕਾਰੀ / ਅਨੁਸਰਣ ਕਰਦੀ ਹੈ?

1. ਮਨੀਪੁਰੀ ਨਰਤਕ
2. ਉਡੀਸੀ ਨਰਤਕ
3. ਕਥਾਕਲੀ
4. ਕਥੱਕ ਨਰਤਕ

**Options :**

485584134649. 1  
485584134650. 2  
485584134651. 3  
485584134652. 4

**Question Number : 299 Question Id : 48558433664 Question Type : MCQ Option Shuffling : No Is Question Mandatory : No Calculator : None Response Time : N.A Think Time : N.A Minimum Instruction Time : 0**

**Correct Marks : 5 Wrong Marks : 1**

**Question Key Details :**

Key	Value
Comprehension	MCQ2

Which among the following is the famous 'couple dancer' of Kuchipudi dance style?

1. Singhajeet Singh and Charu Singh
2. Maulik Shah and Ishira Parekh
3. Raja and Radha Reddy
4. V. P. Dhananjayan and Shanta Dhananjayan

**Options :**

485584134653. 1  
485584134654. 2  
485584134655. 3  
485584134656. 4

**Question Number : 299 Question Id : 48558433664 Question Type : MCQ Option Shuffling : No Is Question Mandatory : No Calculator : None Response Time : N.A Think Time : N.A Minimum Instruction Time : 0**

**Correct Marks : 5 Wrong Marks : 1**

**Question Key Details :**

Key	Value
Comprehension	MCQ2

ਹੇਠ ਲਿਖਿਆਂ ਵਿੱਚ ਕਿਹੜੀ ਕੁਚੀ ਪੁੜੀ ਨਾਚ ਸ਼ੈਲੀ ਦੀ ਪ੍ਰਮੁੱਖ ਨਰਤਕ ਜੋੜੀ ਹੈ?

1. ਸਿੰਘਅਜੀਤ ਸਿੰਘ ਅਤੇ ਚਾਰੂ ਸਿੰਘ
2. ਮੌਲਿਕ ਸ਼ਾਹ ਅਤੇ ਇਸ਼ਰਾ ਪਾਰੇਖ
3. ਰਾਜਾ ਅਤੇ ਰਾਧਾ ਰੇਡੀ
4. ਵੀ. ਪੀ. ਧੰਨਨਜੇਅਮ ਅਤੇ ਸ਼ਾਂਤਾ ਧੰਨਨਜੇਅਮ

**Options :**

485584134653. 1  
485584134654. 2  
485584134655. 3  
485584134656. 4

**Question Number : 300 Question Id : 48558433665 Question Type : MCQ Option Shuffling : No Is Question Mandatory : No Calculator : None Response Time : N.A Think Time : N.A Minimum Instruction Time : 0**

**Correct Marks : 5 Wrong Marks : 1**

**Question Key Details :**

Key	Value
Comprehension	MCQ2

Who is a Sattriya exponent among the following?

1. Jatin Goswami
2. V. P. Dhananjaya
3. Charan Girdhar Chand
4. Shashdhar Acharya

**Options :**

485584134657. 1  
485584134658. 2  
485584134659. 3  
485584134660. 4

**Question Number : 300 Question Id : 48558433665 Question Type : MCQ Option Shuffling : No Is Question Mandatory : No Calculator : None Response Time : N.A Think Time : N.A Minimum Instruction Time : 0**

**Correct Marks : 5 Wrong Marks : 1**

**Question Key Details :**

Key	Value
Comprehension	MCQ2

ਨਿਮਨਲਿਖਿਤ ਵਿੱਚ ਸਤਰੀਆ ਘੜਾਂਕ / ਵਿਆਖਿਆਕਾਰ ਕੌਣ ਹੈ?

1. ਜਤਿਨ ਗੋਸਵਾਮੀ
2. ਵੀ.ਪੀ. ਧੰਨਨਜੇਊ
3. ਚਰਨ ਗਿਰਧਰ ਚਾਂਦ
4. ਸ਼ਾਸਧਰ ਆਚਾਰੀਆ

**Options :**

485584134657. 1  
485584134658. 2  
485584134659. 3  
485584134660. 4

**Question Number : 301 Question Id : 48558433666 Question Type : MCQ Option Shuffling : No Is Question Mandatory : No Calculator : None Response Time : N.A Think Time : N.A Minimum Instruction Time : 0**

**Correct Marks : 5 Wrong Marks : 1**

**Question Key Details :**

Key	Value
Comprehension	MCQ2

What are head movements called in Abhinayadarpanam?

1. Shirobheda
2. Padabheda
3. Hastabheda
4. Drishtibheda

**Options :**

485584134661. 1  
485584134662. 2  
485584134663. 3  
485584134664. 4

**Question Number : 301 Question Id : 48558433666 Question Type : MCQ Option Shuffling : No Is Question Mandatory : No Calculator : None Response Time : N.A Think Time : N.A Minimum Instruction Time : 0**

**Correct Marks : 5 Wrong Marks : 1**

**Question Key Details :**

Key	Value
Comprehension	MCQ2

ਅਭਿਨੈ ਦਰਪਨਮ ਵਿੱਚ ਸਿਰ ਦੀ ਹਰਕਤ ਨੂੰ ਕੀ ਕਹਿੰਦੇ ਹਨ?

1. ਸ਼ਿਰੋਭੇਡਾ
2. ਪਦਾਭੇਡਾ
3. ਹਸਤਭੇਡਾ
4. ਕ੍ਰਿਸ਼ਟੀਭੇਡਾ

**Options :**

485584134661. 1  
485584134662. 2  
485584134663. 3  
485584134664. 4

**Question Number : 302 Question Id : 48558433667 Question Type : MCQ Option Shuffling : No Is Question Mandatory : No Calculator : None Response Time : N.A Think Time : N.A Minimum Instruction Time : 0**

**Correct Marks : 5 Wrong Marks : 1**

**Question Key Details :**

Key	Value
Comprehension	MCQ2

Which is the oldest university with Dance and Music Departments in Gujarat?

1. Benaras Hindu University
2. Rabindra Bharati University
3. The Maharaja Sayajirao university
4. Raja Mansingh Tomar University

**Options :**

485584134665. 1  
485584134666. 2  
485584134667. 3  
485584134668. 4

**Question Number : 302 Question Id : 48558433667 Question Type : MCQ Option Shuffling : No Is Question Mandatory : No Calculator : None Response Time : N.A Think Time : N.A Minimum Instruction Time : 0**

**Correct Marks : 5 Wrong Marks : 1**

**Question Key Details :**

Key	Value
Comprehension	MCQ2

ਗੁਜਰਾਤ ਵਿੱਚ ਨਾਚ ਅਤੇ ਸੰਗੀਤ ਵਿਭਾਗ ਵਾਲੀ ਸਭ ਤੋਂ ਪੁਰਾਣੀ ਯੂਨੀਵਰਸਿਟੀ ਕਿਹੜੀ ਹੈ?

1. ਬਨਾਰਸ ਹਿੰਦੂ ਯੂਨੀਵਰਸਿਟੀ
2. ਰਵਿੰਦਰ ਭਾਰਤੀ ਯੂਨੀਵਰਸਿਟੀ
3. ਦ ਮਹਾਰਾਜਾ ਸਵਾਈ ਰਾਉ ਯੂਨੀਵਰਸਿਟੀ
4. ਰਾਜਾ ਮਾਨ ਸਿੰਘ ਤੋਮਰ ਯੂਨੀਵਰਸਿਟੀ

**Options :**

485584134665. 1  
485584134666. 2  
485584134667. 3  
485584134668. 4

**Question Number : 303 Question Id : 48558433668 Question Type : MCQ Option Shuffling : No Is Question Mandatory : No Calculator : None Response Time : N.A Think Time : N.A Minimum Instruction Time : 0**

**Correct Marks : 5 Wrong Marks : 1**

**Question Key Details :**

Key	Value
Comprehension	MCQ2

"Gat" and "Gat Bhaav" are the items of which classical dance form?

1. Kathakali
2. Sattriya
3. Kathak
4. Bharatanatyam

**Options :**

485584134669. 1  
485584134670. 2  
485584134671. 3  
485584134672. 4

**Question Number : 303 Question Id : 48558433668 Question Type : MCQ Option Shuffling : No Is Question Mandatory : No Calculator : None Response Time : N.A Think Time : N.A Minimum Instruction Time : 0**

**Correct Marks : 5 Wrong Marks : 1**

**Question Key Details :**

Key	Value
Comprehension	MCQ2

" ਗਤ " ਅਤੇ " ਗਤ ਭਾਵ " ਕਿਹੜੇ ਸ਼ਾਸਤਰੀ ਨਾਚ ਰੂਪ ਦੇ ਅੰਗ ਵਿਸ਼ਾ ਹਨ?

1. ਕਥਾਕਲੀ
2. ਸਤਰੀਆਂ
3. ਕਥੱਕ
4. ਭਾਰਤ ਨਾਟਯਮ

**Options :**

485584134669. 1  
485584134670. 2  
485584134671. 3  
485584134672. 4

**Question Number : 304 Question Id : 48558433669 Question Type : MCQ Option Shuffling : No Is Question Mandatory : No Calculator : None Response Time : N.A Think Time : N.A Minimum Instruction Time : 0**

**Correct Marks : 5 Wrong Marks : 1**

**Question Key Details :**

Key	Value
Comprehension	MCQ2

What is head gear called in Kathakali aharya?

1. Kalari
2. Sopanam
3. Kiritam
4. Vesham

**Options :**

485584134673. 1  
485584134674. 2  
485584134675. 3  
485584134676. 4

**Question Number : 304 Question Id : 48558433669 Question Type : MCQ Option Shuffling : No Is Question Mandatory : No Calculator : None Response Time : N.A Think Time : N.A Minimum Instruction Time : 0**

**Correct Marks : 5 Wrong Marks : 1**

**Question Key Details :**

Key	Value
Comprehension	MCQ2

ਕਥਾਕਲੀ ਅਹਾਰਿਆ ਵਿੱਚ ਮੁੱਖ ਗੀਅਰ ਕਿਸ ਨਾਮ ਨਾਲ ਬੁਲਾਇਆ ਜਾਂਦਾ ਹੈ?

1. ਕਲਾਰੀ
2. ਸੋਪਾਨਮ
3. ਕਿਰਿਤਮ
4. ਵੇਸ਼ਮ

**Options :**

485584134673. 1  
485584134674. 2  
485584134675. 3  
485584134676. 4

**Question Number : 305 Question Id : 48558433670 Question Type : MCQ Option Shuffling : No Is Question Mandatory : No Calculator : None Response Time : N.A Think Time : N.A Minimum Instruction Time : 0**

**Correct Marks : 5 Wrong Marks : 1**

**Question Key Details :**

Key	Value
Comprehension	MCQ2

'Geetam Vadyam tatha Nrityam tryam \_\_\_\_\_ muchyate' indicates:

1. Tandava
2. Nritta
3. Lasya
4. Sangeet

**Options :**

485584134677. 1  
485584134678. 2  
485584134679. 3  
485584134680. 4

**Question Number : 305 Question Id : 48558433670 Question Type : MCQ Option Shuffling : No Is Question Mandatory : No Calculator : None Response Time : N.A Think Time : N.A Minimum Instruction Time : 0**

**Correct Marks : 5 Wrong Marks : 1**

**Question Key Details :**

Key	Value
Comprehension	MCQ2

"ਗੀਤਮ ਵਾਦਯਮ ਤਥਾ ਨਰਿਤੀਅਮ ਤਰੇਅਮ \_\_\_\_\_ ਮੁਚੇਤ "

1. ਤਾਂਡਵ
2. ਨ੍ਰਿਤ
3. ਲਸਯਾ
4. ਸੰਗੀਤ

**Options :**

485584134677. 1  
485584134678. 2  
485584134679. 3  
485584134680. 4

**Question Number : 306 Question Id : 48558433671 Question Type : MCQ Option Shuffling : No Is Question Mandatory : No Calculator : None Response Time : N.A Think Time : N.A Minimum Instruction Time : 0**

**Correct Marks : 5 Wrong Marks : 1**

**Question Key Details :**

Key	Value
Comprehension	MCQ2



What is the stylised representation called according to Natyashastra?

1. Bharati
2. Kaishiki
3. Vrittis
4. Natyadharmi

**Options :**

485584134681. 1  
485584134682. 2  
485584134683. 3  
485584134684. 4

**Question Number : 306 Question Id : 48558433671 Question Type : MCQ Option Shuffling : No Is Question Mandatory : No Calculator : None Response Time : N.A Think Time : N.A Minimum Instruction Time : 0**

**Correct Marks : 5 Wrong Marks : 1**

**Question Key Details :**

Key	Value
Comprehension	MCQ2

ਨਾਟਕ ਸ਼ਾਸਤਰ ਦੇ ਅਨੁਸਾਰ ਸ਼ੈਲੀ ਵਾਲੀ ਨੁਮਾਇੰਦਗੀ ਨੂੰ ਕੀ ਕਿਹਾ ਜਾਂਦਾ ਹੈ?

1. ਭਾਰਤੀ
2. ਕੇਸ਼ਕੀ
3. ਵਰਿਤੀਸ
4. ਨਾਟਕਧਰਮੀ

**Options :**

485584134681. 1  
485584134682. 2  
485584134683. 3  
485584134684. 4

**Question Number : 307 Question Id : 48558433672 Question Type : MCQ Option Shuffling : No Is Question Mandatory : No Calculator : None Response Time : N.A Think Time : N.A Minimum Instruction Time : 0**

**Correct Marks : 5 Wrong Marks : 1**

**Question Key Details :**

Key	Value
Comprehension	MCQ2

Chandra-Surya-Rakudi are worn by the dancer of :

1. Kathak
2. Bharatanatyam
3. Manipuri
4. Odissi

**Options :**

485584134685. 1  
485584134686. 2  
485584134687. 3  
485584134688. 4

**Question Number : 307 Question Id : 48558433672 Question Type : MCQ Option Shuffling : No Is Question Mandatory : No Calculator : None Response Time : N.A Think Time : N.A Minimum Instruction Time : 0**

**Correct Marks : 5 Wrong Marks : 1**

**Question Key Details :**

Key	Value
Comprehension	MCQ2

ਚੰਦਰ-ਸੂਰਜ-ਰਕੂਦੀ-ਕਿਹੜੇ ਨਰਤਕਾਂ ਦੁਆਰਾ ਪਹਿਨੇ ਜਾਂਦੇ ਹਨ?

1. ਕਥੱਕ
2. ਭਰਤਨਾਟਯਮ
3. ਮਨੀਪੁਰੀ
4. ਉਡੀਸੀ

**Options :**

485584134685. 1  
485584134686. 2  
485584134687. 3  
485584134688. 4

**Question Number : 308 Question Id : 48558433673 Question Type : MCQ Option Shuffling : No Is Question Mandatory : No Calculator : None Response Time : N.A Think Time : N.A Minimum Instruction Time : 0**

**Correct Marks : 5 Wrong Marks : 1**

**Question Key Details :**

Key	Value
Comprehension	MCQ2

Which abhinaya comprises rendering of text and lyrics according to Bharata?

1. Vachika
2. Angika
3. Aharya
4. Satvika

**Options :**

485584134689. 1  
485584134690. 2  
485584134691. 3  
485584134692. 4

**Question Number : 308 Question Id : 48558433673 Question Type : MCQ Option Shuffling : No Is Question Mandatory : No Calculator : None Response Time : N.A Think Time : N.A Minimum Instruction Time : 0**

**Correct Marks : 5 Wrong Marks : 1**

**Question Key Details :**

Key	Value
Comprehension	MCQ2

ਕਿਸ ਅਭਿਨੈ ਵਿੱਚ ਭਾਰਤਾ ਦੇ ਅਨੁਸਾਰ ਪਾਠ ਅਤੇ ਗੀਤਾਂ / ਬੋਲਾਂ ਦੀ ਪੇਸ਼ਕਾਰੀ ਸ਼ਾਮਲ ਹੈ?

1. ਵਾਚਿਕਾ
2. ਅੰਗਿਕਾ
3. ਅਹਾਰਿਆ
4. ਸਾਤਵਿਕਾ

**Options :**

485584134689. 1  
485584134690. 2  
485584134691. 3  
485584134692. 4

**Question Number : 309 Question Id : 48558433674 Question Type : MCQ Option Shuffling : No Is Question Mandatory : No Calculator : None Response Time : N.A Think Time : N.A Minimum Instruction Time : 0**

**Correct Marks : 5 Wrong Marks : 1**

**Question Key Details :**

Key	Value
Comprehension	MCQ2

In which dance, performers perform the compositions of Mahant Shankar Dev?

1. Mohiniattam
2. Kathak
3. Sattriya
4. Kuchipudi

**Options :**

485584134693. 1  
485584134694. 2  
485584134695. 3  
485584134696. 4

**Question Number : 309 Question Id : 48558433674 Question Type : MCQ Option Shuffling : No Is Question Mandatory : No Calculator : None Response Time : N.A Think Time : N.A Minimum Instruction Time : 0**

**Correct Marks : 5 Wrong Marks : 1**

**Question Key Details :**

Key	Value
Comprehension	MCQ2

ਕਿਹੜੇ ਨਾਚ ਵਿੱਚ ਅਭਿਨੈਕਰਤਾ / ਅਦਾਕਾਰ " ਮਹੰਤ ਸ਼ੰਕਰ ਦੇਵ " ਦੀ ਰਚਨਾ ਨੂੰ ਪ੍ਰਦਰਸ਼ਿਤ ਕਰਦਾ ਹੈ/

1. ਮਹਿਨੀਅਤੱਮ
2. ਕਥੱਕ
3. ਸਤਰਿਆ
4. ਕੁਚੀ ਪੁੜੀ

**Options :**

485584134693. 1  
485584134694. 2  
485584134695. 3  
485584134696. 4

**Question Number : 310 Question Id : 48558433675 Question Type : MCQ Option Shuffling : No Is Question Mandatory : No Calculator : None Response Time : N.A Think Time : N.A Minimum Instruction Time : 0**

**Correct Marks : 5 Wrong Marks : 1**

**Question Key Details :**

Key	Value
Comprehension	MCQ2

What is the earthen pot musical instrument called?

1. Ghatam
2. Morsing
3. Nattuva talam
4. Gajje

**Options :**

485584134697. 1  
485584134698. 2  
485584134699. 3  
485584134700. 4

**Question Number : 310 Question Id : 48558433675 Question Type : MCQ Option Shuffling : No Is Question Mandatory : No Calculator : None Response Time : N.A Think Time : N.A Minimum Instruction Time : 0**

**Correct Marks : 5 Wrong Marks : 1**

**Question Key Details :**

Key	Value
Comprehension	MCQ2

ਮਿੱਟੀ ਦੇ ਘੜੇ ਦੇ ਸੰਗੀਤਕ ਸਾਜ਼ ਨੂੰ ਕੀ ਕਿਹਾ ਜਾਂਦਾ ਹੈ?

1. ਘਟਮ
2. ਮੋਰਸਿੰਗ
3. ਨਤੂਵਾ ਤਾਲਮ
4. ਗੋਜੇ

**Options :**

485584134697. 1  
485584134698. 2  
485584134699. 3  
485584134700. 4

**Question Number : 311 Question Id : 48558433676 Question Type : MCQ Option Shuffling : No Is Question Mandatory : No Calculator : None Response Time : N.A Think Time : N.A Minimum Instruction Time : 0**

**Correct Marks : 5 Wrong Marks : 1**

**Question Key Details :**

Key	Value
Comprehension	MCQ2

Percussion instruments used in classical dances:

- A. Dholak
- B. Tabla
- C. Mridangam
- D. Dholaki
- E. Khol

Choose the answer from the options given below:

1. A, C, D only
2. A, B, C only
3. A, D, E only
4. B, C, E only

**Options :**

- 485584134701. 1
- 485584134702. 2
- 485584134703. 3
- 485584134704. 4

**Question Number : 311 Question Id : 48558433676 Question Type : MCQ Option Shuffling : No Is Question Mandatory : No Calculator : None Response Time : N.A Think Time : N.A Minimum Instruction Time : 0**

**Correct Marks : 5 Wrong Marks : 1**

**Question Key Details :**

Key	Value
Comprehension	MCQ2

ਪਰਕਸ਼ਨ ਯੰਤਰ ਸ਼ਾਸਤਰੀ ਨਾਚ ਵਿੱਚ ਪ੍ਰਯੋਗ ਵਿੱਚ ਲਿਆਇਆ ਜਾਂਦਾ ਹੈ?

- A. ਢੋਲਕ
- B. ਤਬਲਾ
- C. ਮ੍ਰਿਦੰਗਮ
- D. ਢੋਲਕੀ
- E. ਖੋਲ

ਹੇਠਾਂ ਦਿੱਤੇ ਵਿਕਲਪਾਂ ਵਿੱਚੋਂ ਸਹੀ ਉੱਤਰ ਚੁਣੋ:

1. ਸਿਰਫ਼ A, C, D
2. ਸਿਰਫ਼ A, B, C
3. ਸਿਰਫ਼ A, D, E
4. ਸਿਰਫ਼ B, C, E

**Options :**

- 485584134701. 1
- 485584134702. 2
- 485584134703. 3
- 485584134704. 4

**Question Number : 312 Question Id : 48558433677 Question Type : MCQ Option Shuffling : No Is Question Mandatory : No Calculator : None Response Time : N.A Think Time : N.A Minimum Instruction Time : 0**

**Correct Marks : 5 Wrong Marks : 1**

**Question Key Details :**

Key	Value
Comprehension	MCQ2

Lasya dance is characterised as:

- A. Forceful
- B. Delicate
- C. Graceful
- D. Gentle
- E. Bold

Choose the correct answer from the options given below:

- 1. A, C, E only
- 2. B, C, D only
- 3. B, D, E only
- 4. A, B, D only

**Options :**

- 485584134705. 1
- 485584134706. 2
- 485584134707. 3
- 485584134708. 4

**Question Number : 312 Question Id : 48558433677 Question Type : MCQ Option Shuffling : No Is Question Mandatory : No Calculator : None Response Time : N.A Think Time : N.A Minimum Instruction Time : 0**

**Correct Marks : 5 Wrong Marks : 1**

**Question Key Details :**

Key	Value
Comprehension	MCQ2

ਲਸਯਾ ਨਾਚ ਕੀ ਵਿਸ਼ੇਸ਼ਤਾ ਹੈ ਜਿਵੇਂ :

- A. ਜ਼ੋਰਦਾਰ
- B. ਨਾਜ਼ੁਕ
- C. ਸੁੰਦਰ
- D. ਕੋਮਲ
- E. ਨਿਡਰ

ਹੇਠਾਂ ਦਿੱਤੇ ਵਿਕਲਪਾਂ ਵਿੱਚੋਂ ਸਹੀ ਉੱਤਰ ਚੁਣੋ:

1. ਸਿਰਫ਼ A, C, E
2. ਸਿਰਫ਼ B, C, D
3. ਸਿਰਫ਼ B, D, E
4. ਸਿਰਫ਼ A, B, D

**Options :**

- 485584134705. 1
- 485584134706. 2
- 485584134707. 3
- 485584134708. 4

**Question Number : 313 Question Id : 48558433678 Question Type : MCQ Option Shuffling : No Is Question Mandatory : No Calculator : None Response Time : N.A Think Time : N.A Minimum Instruction Time : 0 Correct Marks : 5 Wrong Marks : 1**

**Question Key Details :**

Key	Value
Comprehension	MCQ2

Trace three "Sthayi Bhaav" from the following:

- A. Rati
- B. Nirveda
- C. Krodh
- D. Aalamban
- E. Uddipan

Choose the correct answer from the options given below:

1. A, D, E only
2. A, B, C only
3. C, D, E only
4. B, D, E only

**Options :**

- 485584134709. 1
- 485584134710. 2



485584134711. 3

485584134712. 4

**Question Number : 313 Question Id : 48558433678 Question Type : MCQ Option Shuffling : No Is Question Mandatory : No Calculator : None Response Time : N.A Think Time : N.A Minimum Instruction Time : 0**

**Correct Marks : 5 Wrong Marks : 1**

**Question Key Details :**

Key	Value
Comprehension	MCQ2

ਨਿਮਨਲਿਖਿਤ ਵਿੱਚੋਂ 3 ਸਥਾਈ ਭਾਵ ਦਾ ਪਤਾ ਕਰੋ?

- A. ਰਤੀ
- B. ਨਿਰਵੇਦਾ
- C. ਕ੍ਰੋਧ
- D. ਆਲੰਬਨ
- E. ਉਦੀਪਨ

ਹੇਠਾਂ ਦਿੱਤੇ ਵਿਕਲਪਾਂ ਵਿੱਚੋਂ ਸਹੀ ਉੱਤਰ ਚੁਣੋ:

1. ਸਿਰਫ਼ A, D, E
2. ਸਿਰਫ਼ A, B, C
3. ਸਿਰਫ਼ C, D, E
  
4. ਸਿਰਫ਼ B, D, E

**Options :**

485584134709. 1

485584134710. 2

485584134711. 3

485584134712. 4

**Question Number : 314 Question Id : 48558433679 Question Type : MCQ Option Shuffling : No Is Question Mandatory : No Calculator : None Response Time : N.A Think Time : N.A Minimum Instruction Time : 0**

**Correct Marks : 5 Wrong Marks : 1**

**Question Key Details :**

Key	Value
Comprehension	MCQ2

Choose rasas from the following:

- A. Tandava
- B. Hasya
- C. Beebhatsa
- D. Lasya
- E. Bhayanaka

Choose the correct answer from the options given below:

1. A, C, E only
2. B, D, E only
3. A, C, D only
4. B, C, E only

**Options :**

- 485584134713. 1
- 485584134714. 2
- 485584134715. 3
- 485584134716. 4

**Question Number : 314 Question Id : 48558433679 Question Type : MCQ Option Shuffling : No Is Question Mandatory : No Calculator : None Response Time : N.A Think Time : N.A Minimum Instruction Time : 0**

**Correct Marks : 5 Wrong Marks : 1**

**Question Key Details :**

Key	Value
Comprehension	MCQ2

ਹੇਠ ਲਿਖਿਆਂ ਵਿੱਚੋਂ ਰਸ ਚੁਣੋ?

- A. ਤਾਂਡਵ
- B. ਹਸਾਅ
- C. ਬਿਭਿਤਸਾ
- D. ਲਸਯਾ
- E. ਭਿਆਨਕਾਂ

ਹੇਠਾਂ ਦਿੱਤੇ ਵਿਕਲਪਾਂ ਵਿੱਚੋਂ ਸਹੀ ਉੱਤਰ ਚੁਣੋ:

1. ਸਿਰਫ਼ A, C, E
2. ਸਿਰਫ਼ B, D, E
3. ਸਿਰਫ਼ A, C, D
4. ਸਿਰਫ਼ B, C, E

**Options :**

- 485584134713. 1
- 485584134714. 2
- 485584134715. 3
- 485584134716. 4

**Question Number : 315 Question Id : 48558433680 Question Type : MCQ Option Shuffling : No Is Question Mandatory : No Calculator : None Response Time : N.A Think Time : N.A Minimum Instruction Time : 0**

**Correct Marks : 5 Wrong Marks : 1**

**Question Key Details :**

Key	Value
Comprehension	MCQ2

Which two are not "Rasa" from among the following?

- A. Aashcharya
- B. Adbhut
- C. Nirveda
- D. Karuna
- E. Roudra

Choose the correct answer from the options given below:

- 1. A and C only
- 2. A and D only
- 3. B and D only
- 4. A and E only

**Options :**

- 485584134717. 1
- 485584134718. 2
- 485584134719. 3
- 485584134720. 4

**Question Number : 315 Question Id : 48558433680 Question Type : MCQ Option Shuffling : No Is Question Mandatory : No Calculator : None Response Time : N.A Think Time : N.A Minimum Instruction Time : 0**

**Correct Marks : 5 Wrong Marks : 1**

**Question Key Details :**

Key	Value
Comprehension	MCQ2

ਹੇਠ ਲਿਖਿਆਂ ਵਿੱਚੋਂ ਕਿਹੜੇ ਦੋ ਰਸ ਨਹੀਂ ਹਨ??

- A. ਆਸਚਰਯ
- B. ਅਦਭੁੱਤ
- C. ਨਿਰਵੈਦਾ
- D. ਕਰੁਣਾ
- E. ਰੁਦਰ

ਹੇਠਾਂ ਦਿੱਤੇ ਵਿਕਲਪਾਂ ਵਿੱਚੋਂ ਸਹੀ ਉੱਤਰ ਚੁਣੋ:

1. ਸਿਰਫ਼ A ਅਤੇ C
2. ਸਿਰਫ਼ A ਅਤੇ D
3. ਸਿਰਫ਼ B ਅਤੇ D
4. ਸਿਰਫ਼ A ਅਤੇ E

**Options :**

- 485584134717. 1
- 485584134718. 2
- 485584134719. 3
- 485584134720. 4

**Question Number : 316 Question Id : 48558433681 Question Type : MCQ Option Shuffling : No Is Question Mandatory : No Calculator : None Response Time : N.A Think Time : N.A Minimum Instruction Time : 0**

**Correct Marks : 5 Wrong Marks : 1**

**Question Key Details :**

Key	Value
Comprehension	MCQ2

Match List I with List II

LIST I		LIST II	
A.	Haas	I.	Veer
B.	Utsah	II.	Hasya
C.	Rati	III.	Karun
D.	Shoka	IV.	Shringar

Choose the correct answer from the options given below:

1. A-I, B-II, C-III, D-IV
2. A-II, B-III, C-I, D-IV
3. A-II, B-I, C-IV, D-III
4. A-IV, B-III, C-II, D-I

**Options :**

- 485584134721. 1
- 485584134722. 2
- 485584134723. 3
- 485584134724. 4

Question Number : 316 Question Id : 48558433681 Question Type : MCQ Option Shuffling : No Is Question Mandatory : No Calculator : None Response Time : N.A Think Time : N.A Minimum Instruction Time : 0

Correct Marks : 5 Wrong Marks : 1

Question Key Details :

Key	Value
Comprehension	MCQ2

ਸੂਚੀ I ਦਾ ਸੂਚੀ II ਨਾਲ ਮਿਲਾਣ ਕਰੋ:

ਸੂਚੀ I		ਸੂਚੀ II	
A.	ਹਾਸ	I.	ਵੀਰ
B.	ਉਤਸਾਹ	II.	ਹਾਸ
C.	ਰਤੀ	III.	ਕਰੁਣਾ
D.	ਸ਼ੋਕ	IV.	ਸਿੰਗਾਰ

ਹੇਠਾਂ ਦਿੱਤੇ ਵਿਕਲਪਾਂ ਵਿੱਚੋਂ ਸਹੀ ਉੱਤਰ ਚੁਣੋ:

1. A-I, B-II, C-III, D-IV
2. A-II, B-III, C-I, D-IV
3. A-II, B-I, C-IV, D-III
4. A-IV, B-III, C-II, D-I

Options :

485584134721. 1  
485584134722. 2  
485584134723. 3  
485584134724. 4

Question Number : 317 Question Id : 48558433682 Question Type : MCQ Option Shuffling : No Is Question Mandatory : No Calculator : None Response Time : N.A Think Time : N.A Minimum Instruction Time : 0

Correct Marks : 5 Wrong Marks : 1

Question Key Details :

Key	Value
Comprehension	MCQ2

Match List I with List II

LIST I		LIST II	
A.	Alarippu	I.	Kathak
B.	Pallavi	II.	Odissi
C.	Jiva	III.	Bharatanatyam
D.	Tarana	IV.	Mohiniattam

Choose the correct answer from the options given below:

1. A-III, B-II, C-IV, D-I
2. A-II, B-I, C-III, D-IV
3. A-IV, B-III, C-II, D-I
4. A-I, B-III, C-II, D-IV

**Options :**

485584134725. 1  
485584134726. 2  
485584134727. 3  
485584134728. 4

**Question Number : 317 Question Id : 48558433682 Question Type : MCQ Option Shuffling : No Is Question Mandatory : No Calculator : None Response Time : N.A Think Time : N.A Minimum Instruction Time : 0**

**Correct Marks : 5 Wrong Marks : 1**

**Question Key Details :**

Key	Value
Comprehension	MCQ2

ਸੂਚੀ I ਦਾ ਸੂਚੀ II ਨਾਲ ਮਿਲਾਣ ਕਰੋ:

ਸੂਚੀ I		ਸੂਚੀ II	
A.	ਅਲਾਰੀਪੁ	I.	ਕਥਕ
B.	ਪਲੱਵੀ	II.	ਉਡੀਸੀ
C.	ਜੀਵਾ	III.	ਭਾਰਤਨਾਟਯਮ
D.	ਤਰਾਨਾ	IV.	ਮੋਹਿਨੀਅੱਤਮ

ਹੇਠਾਂ ਦਿੱਤੇ ਵਿਕਲਪਾਂ ਵਿੱਚੋਂ ਸਹੀ ਉੱਤਰ ਚੁਣੋ:

1. A-III, B-II, C-IV, D-I
2. A-II, B-I, C-III, D-IV
3. A-IV, B-III, C-II, D-I
4. A-I, B-III, C-II, D-IV

**Options :**

485584134725. 1  
485584134726. 2  
485584134727. 3  
485584134728. 4

Question Number : 318 Question Id : 48558433683 Question Type : MCQ Option Shuffling : No Is Question Mandatory : No Calculator : None Response Time : N.A Think Time : N.A Minimum Instruction Time : 0

Correct Marks : 5 Wrong Marks : 1

Question Key Details :

Key	Value
Comprehension	MCQ2

Match List I with List II

LIST I		LIST II	
A.	Cause - Determinants	I.	Vyabichari bhava
B.	Consequences-reactions	II.	Rasa
C.	Complementary expression	III.	Vibhava
D.	Sentiment	IV.	Anubhava

Choose the correct answer from the options given below:

1. A-II, B-I, C-III, D-IV
2. A-III, B-IV, C-I, D-II
3. A-IV, B-II, C-III, D-I
4. A-I, B-III, C-II, D-IV

Options :

485584134729. 1  
485584134730. 2  
485584134731. 3  
485584134732. 4

Question Number : 318 Question Id : 48558433683 Question Type : MCQ Option Shuffling : No Is Question Mandatory : No Calculator : None Response Time : N.A Think Time : N.A Minimum Instruction Time : 0

Correct Marks : 5 Wrong Marks : 1

Question Key Details :

Key	Value
Comprehension	MCQ2

ਸੂਚੀ I ਦਾ ਸੂਚੀ II ਨਾਲ ਮਿਲਾਣ ਕਰੋ:

ਸੂਚੀ I		ਸੂਚੀ II	
A.	ਕਾਰਣ	I.	ਵਿਆਭਾਚਾਰੀ
B.	ਨਤੀਜੇ - ਪ੍ਰਤੀਕਰਮ	II.	ਰਸ
C.	ਪੁਰਕ ਸਮੀਕਰਣ	III.	ਵਿਭਾਵਾ
D.	ਭਾਵਨਾ	IV.	ਅਨੁਭਵ

ਹੇਠਾਂ ਦਿੱਤੇ ਵਿਕਲਪਾਂ ਵਿੱਚੋਂ ਸਹੀ ਉੱਤਰ ਚੁਣੋ:

1. A-II, B-I, C-III, D-IV
2. A-III, B-IV, C-I, D-II
3. A-IV, B-II, C-III, D-I
4. A-I, B-III, C-II, D-IV

**Options :**

485584134729. 1  
 485584134730. 2  
 485584134731. 3  
 485584134732. 4

**Question Number : 319 Question Id : 48558433684 Question Type : MCQ Option Shuffling : No Is Question Mandatory : No Calculator : None Response Time : N.A Think Time : N.A Minimum Instruction Time : 0**

**Correct Marks : 5 Wrong Marks : 1**

**Question Key Details :**

Key	Value
Comprehension	MCQ2

Match List I with List II

LIST I		LIST II	
A.	Odiyanam	I.	ear ornament
B.	Chandra-Surya	II.	three round balls attached to hair
C.	Kunjalam	III.	head ornament
D.	Jhumiki	IV.	belt

Choose the correct answer from the options given below:

1. A-II, B-I, C-III, D-IV
2. A-III, B-IV, C-I, D-II
3. A-I, B-IV, C-III, D-II
4. A-IV, B-III, C-II, D-I

**Options :**

485584134733. 1  
 485584134734. 2  
 485584134735. 3  
 485584134736. 4

**Question Number : 319 Question Id : 48558433684 Question Type : MCQ Option Shuffling : No Is Question Mandatory : No Calculator : None Response Time : N.A Think Time : N.A Minimum Instruction Time : 0**

**Correct Marks : 5 Wrong Marks : 1**

**Question Key Details :**

Key	Value
Comprehension	MCQ2



ਸੂਚੀ I ਦਾ ਸੂਚੀ II ਨਾਲ ਮਿਲਾਣ ਕਰੋ:

ਸੂਚੀ I		ਸੂਚੀ II	
A.	ਉਡੀਅਨਮ	I.	ਕੰਨ ਦੇ ਗਹਿਣੇ
B.	ਚੰਦਰ - ਸੂਰਯ	II.	ਤਿੰਨ ਗੋਲ ਗੋਂਦਾ ਵਾਲਾ ਨਾਲ ਜੁੜੀਆਂ ਹੋਈਆਂ
C.	ਕੁੰਜਾਲਮ	III.	ਸਿਰ ਦੇ ਗਹਿਣੇ
D.	ਝੁਮਕੀ	IV.	ਬੈਲਟ

ਹੇਠਾਂ ਦਿੱਤੇ ਵਿਕਲਪਾਂ ਵਿੱਚੋਂ ਸਹੀ ਉੱਤਰ ਚੁਣੋ:

1. A-II, B-I, C-III, D-IV
2. A-III, B-IV, C-I, D-II
3. A-I, B-IV, C-III, D-II
4. A-IV, B-III, C-II, D-I

**Options :**

485584134733. 1  
485584134734. 2  
485584134735. 3  
485584134736. 4

**Question Number : 320 Question Id : 48558433685 Question Type : MCQ Option Shuffling : No Is Question Mandatory : No Calculator : None Response Time : N.A Think Time : N.A Minimum Instruction Time : 0**

**Correct Marks : 5 Wrong Marks : 1**

**Question Key Details :**

Key	Value
Comprehension	MCQ2

Give the correct order of the following rasas according to Natyashastra:

- A. Raudra
- B. Hasya
- C. Veera
- D. Shringara
- E. Karuna

Choose the correct answer from the options given below:

1. B, A, E, D, C
2. D, C, A, E, B
3. A, C, E, B, D
4. D, B, E, A, C

**Options :**

485584134737. 1  
485584134738. 2  
485584134739. 3  
485584134740. 4

Question Number : 320 Question Id : 48558433685 Question Type : MCQ Option Shuffling : No Is Question Mandatory : No Calculator : None Response Time : N.A Think Time : N.A Minimum Instruction Time : 0

Correct Marks : 5 Wrong Marks : 1

Question Key Details :

Key	Value
Comprehension	MCQ2

ਹੇਠ ਲਿਖੇ ਰਸਾ ਨੂੰ ਨਾਟਕ ਸ਼ਾਸਤਰ ਅਨੁਸਾਰ ਸਹੀ ਤਰਤੀਬ ਦਿਉ ?

- A. ਰੌਦਰ
- B. ਹਾਸ
- C. ਵੀਨਾ
- D. ਸਿੰਗਾਰ
- E. ਕਰੁਣਾ

ਹੇਠਾਂ ਦਿੱਤੇ ਵਿਕਲਪਾਂ ਵਿੱਚੋਂ ਸਹੀ ਉੱਤਰ ਚੁਣੋ:

- 1. B, A, E, D, C
- 2. D, C, A, E, B
- 3. A, C, E, B, D
- 4. D, B, E, A, C

Options :

- 485584134737. 1
- 485584134738. 2
- 485584134739. 3
- 485584134740. 4

## Percussion Music

Section Id :	485584865
Section Number :	4
Section type :	Online
Mandatory or Optional :	Optional
Number of Questions :	25
Number of Questions to be attempted :	20
Section Marks :	100
Enable Mark as Answered Mark for Review and Clear Response :	Yes
Maximum Instruction Time :	0
Sub-Section Number :	1
Sub-Section Id :	4855842440
Question Shuffling Allowed :	Yes
Is Section Default? :	null

Question Number : 321 Question Id : 48558433686 Question Type : MCQ Option Shuffling : No Is Question Mandatory : No Calculator : None Response Time : N.A Think Time : N.A Minimum Instruction Time : 0

Correct Marks : 5 Wrong Marks : 1

Question Key Details :

Key	Value
Comprehension	MCQ3

Zakir Hussain belongs to which of the following Tabla gharanas?

1. Punjab
2. Delhi
3. Ajrada
4. Lucknow

**Options :**

485584134741. 1  
485584134742. 2  
485584134743. 3  
485584134744. 4

**Question Number : 321 Question Id : 48558433686 Question Type : MCQ Option Shuffling : No Is Question Mandatory : No Calculator : None Response Time : N.A Think Time : N.A Minimum Instruction Time : 0**

**Correct Marks : 5 Wrong Marks : 1**

**Question Key Details :**

Key	Value
Comprehension	MCQ3

ਜ਼ਾਕਿਰ ਹੁਸੈਨ ਹੇਠ ਲਿਖਿਆਂ ਵਿੱਚੋਂ ਕਿਸ ਤਬਲਾ ਘਰਾਣੇ ਨਾਲ ਸੰਬੰਧ ਰੱਖਦਾ ਹੈ?

1. ਪੰਜਾਬ
2. ਦਿੱਲੀ
3. ਅਜਰਾਦਾ
4. ਲਖਨਊ

**Options :**

485584134741. 1  
485584134742. 2  
485584134743. 3  
485584134744. 4

**Question Number : 322 Question Id : 48558433687 Question Type : MCQ Option Shuffling : No Is Question Mandatory : No Calculator : None Response Time : N.A Think Time : N.A Minimum Instruction Time : 0**

**Correct Marks : 5 Wrong Marks : 1**

**Question Key Details :**

Key	Value
Comprehension	MCQ3

Identify the Tala - Dha Ge Na Ti ....

1. Dadra
2. Rupak
3. Kaharwa
4. Sooltala

**Options :**

485584134745. 1  
485584134746. 2  
485584134747. 3  
485584134748. 4

**Question Number : 322 Question Id : 48558433687 Question Type : MCQ Option Shuffling : No Is Question Mandatory : No Calculator : None Response Time : N.A Think Time : N.A Minimum Instruction Time : 0**

**Correct Marks : 5 Wrong Marks : 1**

**Question Key Details :**

Key	Value
Comprehension	MCQ3

ਤਾਲ ਠੂੰ ਪਛਾਣੋ -ਧਾ, ਗੇ, ਨਾ, ਤੀ,

1. ਦਾਦਰਾ
2. ਰੂਪਕ
3. ਕਹਰਵਾ
4. ਸੁਲਤਾਲ

**Options :**

485584134745. 1  
485584134746. 2  
485584134747. 3  
485584134748. 4

**Question Number : 323 Question Id : 48558433688 Question Type : MCQ Option Shuffling : No Is Question Mandatory : No Calculator : None Response Time : N.A Think Time : N.A Minimum Instruction Time : 0**

**Correct Marks : 5 Wrong Marks : 1**

**Question Key Details :**

Key	Value
Comprehension	MCQ3

In Natyashastra, which instruments (Vadya) are found similar to Pakhawaj?

1. Ankik
2. Urdhwak
3. Aalingya
4. Jodi

**Options :**

485584134749. 1  
485584134750. 2  
485584134751. 3  
485584134752. 4

**Question Number : 323 Question Id : 48558433688 Question Type : MCQ Option Shuffling : No Is Question Mandatory : No Calculator : None Response Time : N.A Think Time : N.A Minimum Instruction Time : 0**

**Correct Marks : 5 Wrong Marks : 1**

**Question Key Details :**

Key	Value
Comprehension	MCQ3

ਨਾਟਕਸ਼ਾਸਤਰ ਵਿੱਚ ਪੱਖਵਾਜ ਦੇ ਸਮਾਨ ਕਿਹੜੇ ਯੰਤਰ / ਸਾਜ਼ ਮਿਲਦੇ / ਆਧਾਰ ਹਨ?

1. ਅੰਕਿਕ
2. ਉਰਧਵਾਕ
3. ਅਲਿੰਗਿਆ
4. ਜੋੜੀ

**Options :**

485584134749. 1  
485584134750. 2  
485584134751. 3  
485584134752. 4

**Question Number : 324 Question Id : 48558433689 Question Type : MCQ Option Shuffling : No Is Question Mandatory : No Calculator : None Response Time : N.A Think Time : N.A Minimum Instruction Time : 0**

**Correct Marks : 5 Wrong Marks : 1**

**Question Key Details :**

Key	Value
Comprehension	MCQ3

Jhump Tal accompanies which form of music?

1. Hindustani
2. Karnatak
3. Punjabi
4. Hariyanwi

**Options :**

485584134753. 1  
485584134754. 2  
485584134755. 3  
485584134756. 4

**Question Number : 324 Question Id : 48558433689 Question Type : MCQ Option Shuffling : No Is Question Mandatory : No Calculator : None Response Time : N.A Think Time : N.A Minimum Instruction Time : 0**

**Correct Marks : 5 Wrong Marks : 1**

**Question Key Details :**

Key	Value
Comprehension	MCQ3

ਝਪਤਾਲ ਸੰਗੀਤ ਦੇ ਕਿਸ ਰੂਪ ਨਾਲ ਸੰਬੰਧਿਤ / ਜੋੜਦਾ ਹੈ।

1. ਹਿੰਦੁਸਤਾਨ
2. ਕਰਨਾਟਕ
3. ਪੰਜਾਬੀ
4. ਹਰਿਆਣਵੀ

**Options :**

485584134753. 1  
485584134754. 2  
485584134755. 3  
485584134756. 4

**Question Number : 325 Question Id : 48558433690 Question Type : MCQ Option Shuffling : No Is Question Mandatory : No Calculator : None Response Time : N.A Think Time : N.A Minimum Instruction Time : 0**

**Correct Marks : 5 Wrong Marks : 1**

**Question Key Details :**

Key	Value
Comprehension	MCQ3

Which Tala is accompanied with Dhrupad?

1. Teen Tala
2. Jhump Tala
3. Sooltala
4. Ektala

**Options :**

485584134757. 1  
485584134758. 2  
485584134759. 3  
485584134760. 4

**Question Number : 325 Question Id : 48558433690 Question Type : MCQ Option Shuffling : No Is Question Mandatory : No Calculator : None Response Time : N.A Think Time : N.A Minimum Instruction Time : 0**

**Correct Marks : 5 Wrong Marks : 1**

**Question Key Details :**

Key	Value
Comprehension	MCQ3

ਕਿਹੜਾ ਤਾਲ ਧਰੁਪਦ ਨਾਲ ਸੰਬੰਧਿਤ ਹੈ?

1. ਤੀਨ ਤਾਲ
2. ਝਪ ਤਾਲ
3. ਸੁਲਤਾਲ
4. ਇੱਕ ਤਾਲ

**Options :**

485584134757. 1  
485584134758. 2  
485584134759. 3  
485584134760. 4

**Question Number : 326 Question Id : 48558433691 Question Type : MCQ Option Shuffling : No Is Question Mandatory : No Calculator : None Response Time : N.A Think Time : N.A Minimum Instruction Time : 0**

**Correct Marks : 5 Wrong Marks : 1**

**Question Key Details :**

Key	Value
Comprehension	MCQ3

Which Tala is played with Bhajan?

1. Kaharwa
2. Rudra
3. Lilawati
4. Vishnu

**Options :**

485584134761. 1  
485584134762. 2  
485584134763. 3  
485584134764. 4

**Question Number : 326 Question Id : 48558433691 Question Type : MCQ Option Shuffling : No Is Question Mandatory : No Calculator : None Response Time : N.A Think Time : N.A Minimum Instruction Time : 0**

**Correct Marks : 5 Wrong Marks : 1**

**Question Key Details :**

Key	Value
Comprehension	MCQ3

ਭਜਨ ਨਾਲ ਕਿਹੜਾ ਤਾਲ ਵਜਾਇਆ ਜਾਂਦਾ ਹੈ?

1. ਕਹਰਵਾ
2. ਰੂਦਰ
3. ਲੀਲਾਵਤੀ
4. ਵਿਸ਼ਨੂੰ

**Options :**

485584134761. 1  
485584134762. 2  
485584134763. 3  
485584134764. 4

**Question Number : 327 Question Id : 48558433692 Question Type : MCQ Option Shuffling : No Is Question Mandatory : No Calculator : None Response Time : N.A Think Time : N.A Minimum Instruction Time : 0**

**Correct Marks : 5 Wrong Marks : 1**

**Question Key Details :**

Key	Value
Comprehension	MCQ3



Who was the founder of Delhi Gharana?

1. Modu Khan
2. Kallu Khan
3. Siddhar Khan
4. Hasan Khan

**Options :**

485584134765. 1  
485584134766. 2  
485584134767. 3  
485584134768. 4

**Question Number : 327 Question Id : 48558433692 Question Type : MCQ Option Shuffling : No Is Question Mandatory : No Calculator : None Response Time : N.A Think Time : N.A Minimum Instruction Time : 0**

**Correct Marks : 5 Wrong Marks : 1**

**Question Key Details :**

Key	Value
Comprehension	MCQ3

ਦਿੱਲੀ ਘਰਾਣੇ ਦੇ ਸੰਸਥਾਪਕ ਕੌਣ ਸਨ?

1. ਮੋਦੂ ਖਾਨ
2. ਕਾਲੂ ਖਾਨ
3. ਸਿਧਾਰ ਖਾਨ
4. ਹਸਨ ਖਾਨ

**Options :**

485584134765. 1  
485584134766. 2  
485584134767. 3  
485584134768. 4

**Question Number : 328 Question Id : 48558433693 Question Type : MCQ Option Shuffling : No Is Question Mandatory : No Calculator : None Response Time : N.A Think Time : N.A Minimum Instruction Time : 0**

**Correct Marks : 5 Wrong Marks : 1**

**Question Key Details :**

Key	Value
Comprehension	MCQ3

Mridangam is made from the wood of :

1. Aam (Mango)
2. Shisham
3. Jamun
4. Kathal (Jackfruit)

**Options :**

485584134769. 1  
485584134770. 2  
485584134771. 3  
485584134772. 4

**Question Number : 328 Question Id : 48558433693 Question Type : MCQ Option Shuffling : No Is Question Mandatory : No Calculator : None Response Time : N.A Think Time : N.A Minimum Instruction Time : 0**

**Correct Marks : 5 Wrong Marks : 1**

**Question Key Details :**

Key	Value
Comprehension	MCQ3

ਮ੍ਰਿਦਨਗਮ ਕਿਸ ਦੀ ਲੱਕੜੀ ਦਾ ਬਣਿਆ ਹੈ?

1. ਅੰਬ ( ਮੈਂਗੋ )
2. ਸ਼ੀਸ਼ਮ
3. ਜਾਮੁਨ
4. ਕਟਹਲ ( ਜੈਕ ਫਲ )

**Options :**

485584134769. 1  
485584134770. 2  
485584134771. 3  
485584134772. 4

**Question Number : 329 Question Id : 48558433694 Question Type : MCQ Option Shuffling : No Is Question Mandatory : No Calculator : None Response Time : N.A Think Time : N.A Minimum Instruction Time : 0**

**Correct Marks : 5 Wrong Marks : 1**

**Question Key Details :**

Key	Value
Comprehension	MCQ3

How many 'Gullis' are used in Pakhawaj?

1. 6
2. 8
3. 10
4. 12

**Options :**

485584134773. 1  
485584134774. 2  
485584134775. 3  
485584134776. 4

**Question Number : 329 Question Id : 48558433694 Question Type : MCQ Option Shuffling : No Is Question Mandatory : No Calculator : None Response Time : N.A Think Time : N.A Minimum Instruction Time : 0**

**Correct Marks : 5 Wrong Marks : 1**

**Question Key Details :**

Key	Value
Comprehension	MCQ3

ਕਿੰਨੀਆਂ ਗੁੱਲੀਆਂ ਪੱਖਵਾਜ਼ ਵਿੱਚ ਪ੍ਰਯੋਗ ਕੀਤੀਆਂ ਜਾਂਦੀਆਂ ਹਨ?

ਜਾਂ

ਪੱਖਵਾਜ਼ ਵਿੱਚ ਕਿੰਨੀਆਂ ਗੁੱਲੀਆਂ ਪ੍ਰਯੋਗ ਵਿੱਚ ਲਿਆਇਆ ਜਾਂਦੀਆਂ ਹਨ?

1. 6
2. 8
3. 10
4. 12

**Options :**

485584134773. 1  
485584134774. 2  
485584134775. 3  
485584134776. 4

**Question Number : 330 Question Id : 48558433695 Question Type : MCQ Option Shuffling : No Is Question Mandatory : No Calculator : None Response Time : N.A Think Time : N.A Minimum Instruction Time : 0**

**Correct Marks : 5 Wrong Marks : 1**

**Question Key Details :**

Key	Value
Comprehension	MCQ3

Kudau Singh is related to which musical instrument (Vadya)?

1. Tabla
2. Pakhawaj
3. Mridangam
4. Punga

**Options :**

485584134777. 1  
485584134778. 2  
485584134779. 3  
485584134780. 4

**Question Number : 330 Question Id : 48558433695 Question Type : MCQ Option Shuffling : No Is Question Mandatory : No Calculator : None Response Time : N.A Think Time : N.A Minimum Instruction Time : 0**

**Correct Marks : 5 Wrong Marks : 1**

**Question Key Details :**

Key	Value
Comprehension	MCQ3

ਕੁਦਾਊ ਸਿੰਘ ਕਿਹੜੇ ਸੰਗੀਤਕ ਯੰਤਰ ( ਵਾਦਯ ) ਨਾਲ ਸੰਬੰਧ ਰੱਖਦੇ ਹਨ?

1. ਤਬਲਾ
2. ਪੱਖਵਾਜ਼
3. ਮ੍ਰਿਦਨਗਮ
4. ਪੁੰਗਾ

**Options :**

485584134777. 1  
485584134778. 2  
485584134779. 3  
485584134780. 4

**Question Number : 331 Question Id : 48558433696 Question Type : MCQ Option Shuffling : No Is Question Mandatory : No Calculator : None Response Time : N.A Think Time : N.A Minimum Instruction Time : 0**

**Correct Marks : 5 Wrong Marks : 1**

**Question Key Details :**

Key	Value
Comprehension	MCQ3

Kayada of Ada laya is famous in which Gharana?

1. Delhi
2. Punjab
3. Ajrada
4. Farukhabad

**Options :**

485584134781. 1  
485584134782. 2  
485584134783. 3  
485584134784. 4

**Question Number : 331 Question Id : 48558433696 Question Type : MCQ Option Shuffling : No Is Question Mandatory : No Calculator : None Response Time : N.A Think Time : N.A Minimum Instruction Time : 0**

**Correct Marks : 5 Wrong Marks : 1**

**Question Key Details :**

Key	Value
Comprehension	MCQ3

ਅਦਾ ਲੈਅ ਦਾ ਕਿਆਦਾ ਕਿਸ ਘਰਾਣੇ ਵਿੱਚ ਮਸ਼ਹੂਰ ਹੈ?

1. ਦਿੱਲੀ
2. ਪੰਜਾਬ
3. ਅਜਰਾਦਾ
4. ਫ਼ਾਰੂਖਾਬਾਦ

**Options :**

485584134781. 1  
485584134782. 2  
485584134783. 3  
485584134784. 4

**Question Number : 332 Question Id : 48558433697 Question Type : MCQ Option Shuffling : No Is Question Mandatory : No Calculator : None Response Time : N.A Think Time : N.A Minimum Instruction Time : 0**

**Correct Marks : 5 Wrong Marks : 1**

**Question Key Details :**

Key	Value
Comprehension	MCQ3

'Dha' Varna is related to which instrument (Vadya)?

1. Sitar
2. Sarod
3. Pakhawaj
4. Violin

**Options :**

485584134785. 1  
485584134786. 2  
485584134787. 3  
485584134788. 4

**Question Number : 332 Question Id : 48558433697 Question Type : MCQ Option Shuffling : No Is Question Mandatory : No Calculator : None Response Time : N.A Think Time : N.A Minimum Instruction Time : 0**

**Correct Marks : 5 Wrong Marks : 1**

**Question Key Details :**

Key	Value
Comprehension	MCQ3

" धा " ਵਰਣ ਕਿਸ ਯੰਤਰ ( ਵਾਦਯ ) ਨਾਲ ਸੰਬੰਧਿਤ ਹੈ?

1. ਸਿਤਾਰ
2. ਸਰੋਦ
3. ਪੱਖਵਾਜ਼
4. ਵਾਇਲਿਨ

**Options :**

485584134785. 1  
485584134786. 2  
485584134787. 3  
485584134788. 4

**Question Number : 333 Question Id : 48558433698 Question Type : MCQ Option Shuffling : No Is Question Mandatory : No Calculator : None Response Time : N.A Think Time : N.A Minimum Instruction Time : 0**

**Correct Marks : 5 Wrong Marks : 1**

**Question Key Details :**

Key	Value
Comprehension	MCQ3

Ta, Deem, Dom, Nam varnas pertain to which instrument (Vadya)?

1. Pakhawaj
2. Tabla
3. Dholak
4. Mridangam

**Options :**

485584134789. 1  
485584134790. 2  
485584134791. 3  
485584134792. 4

**Question Number : 333 Question Id : 48558433698 Question Type : MCQ Option Shuffling : No Is Question Mandatory : No Calculator : None Response Time : N.A Think Time : N.A Minimum Instruction Time : 0**

**Correct Marks : 5 Wrong Marks : 1**

**Question Key Details :**

Key	Value
Comprehension	MCQ3

ਤਾ, ਦੀਮ, ਦੇਮ, ਨਾਮ ਵਰਣ ਕਿਸ ਯੰਤਰ ( ਵਾਦਯ ) ਨਾਲ ਸੰਬੰਧਿਤ / ਅਨੁਕੂਲ ਹਨ?

1. ਪੱਖਵਾਜ਼
2. ਤਬਲਾ
3. ਢੋਲਕ
4. ਮ੍ਰਿਦਨਗਮ

**Options :**

485584134789. 1  
485584134790. 2  
485584134791. 3  
485584134792. 4

**Question Number : 334 Question Id : 48558433699 Question Type : MCQ Option Shuffling : No Is Question Mandatory : No Calculator : None Response Time : N.A Think Time : N.A Minimum Instruction Time : 0**

**Correct Marks : 5 Wrong Marks : 1**

**Question Key Details :**

Key	Value
Comprehension	MCQ3

'Pharan' is played on:

1. Khol
2. Tabla
3. Pakhawaj
4. Mridangam

**Options :**

485584134793. 1  
485584134794. 2  
485584134795. 3  
485584134796. 4

**Question Number : 334 Question Id : 48558433699 Question Type : MCQ Option Shuffling : No Is Question Mandatory : No Calculator : None Response Time : N.A Think Time : N.A Minimum Instruction Time : 0**

**Correct Marks : 5 Wrong Marks : 1**

**Question Key Details :**

Key	Value
Comprehension	MCQ3

ਫਰਨ ਕਿਸ ਤੇ ਵਜਾਇਆ ਜਾਂਦਾ ਹੈ?

1. ਖੋਲ
2. ਤਬਲਾ
3. ਪੱਖਵਾਜ਼
4. ਮ੍ਰਿਦਨਗਮ

**Options :**

485584134793. 1  
485584134794. 2  
485584134795. 3  
485584134796. 4

**Question Number : 335 Question Id : 48558433700 Question Type : MCQ Option Shuffling : No Is Question Mandatory : No Calculator : None Response Time : N.A Think Time : N.A Minimum Instruction Time : 0**

**Correct Marks : 5 Wrong Marks : 1**

**Question Key Details :**

Key	Value
Comprehension	MCQ3



Matras are indicated by the sign -

1. X X X

2. # # #

3. 1 2 3

4. 1 1 1

**Options :**

485584134797. 1

485584134798. 2

485584134799. 3

485584134800. 4

**Question Number : 335 Question Id : 48558433700 Question Type : MCQ Option Shuffling : No Is Question Mandatory : No Calculator : None Response Time : N.A Think Time : N.A Minimum Instruction Time : 0**

**Correct Marks : 5 Wrong Marks : 1**

**Question Key Details :**

Key	Value
Comprehension	MCQ3

ਮਾਤਰਾ ਕਿਸ ਚਿੰਨ੍ਹ ਦੁਆਰਾ ਦਰਸਾਈਆਂ ਗਈਆਂ ਹਨ?

1. X X X

2. # # #

3. 1 2 3

4. 1 1 1

**Options :**

485584134797. 1

485584134798. 2

485584134799. 3

485584134800. 4

**Question Number : 336 Question Id : 48558433701 Question Type : MCQ Option Shuffling : No Is Question Mandatory : No Calculator : None Response Time : N.A Think Time : N.A Minimum Instruction Time : 0**

**Correct Marks : 5 Wrong Marks : 1**

**Question Key Details :**

Key	Value
Comprehension	MCQ3

Earmark the laya 'Thah':

1. 1 2 3 4

2. 12 34 56 78

3. 123 456 789 10,11,12

4. 1234 1234 1234 1234

**Options :**

485584134801. 1

485584134802. 2

485584134803. 3

485584134804. 4

**Question Number : 336 Question Id : 48558433701 Question Type : MCQ Option Shuffling : No Is Question Mandatory : No Calculator : None Response Time : N.A Think Time : N.A Minimum Instruction Time : 0**

**Correct Marks : 5 Wrong Marks : 1**

**Question Key Details :**

Key	Value
Comprehension	MCQ3

ਠਾਹਾ ਲੈਅ ਦਾ ਨਿਸ਼ਾਨ / ਛਾਪ ਦੱਸੋ ?

1. 1 2 3 4

2. 12 34 56 78

3. 123 456 789 10,11,12

4. 1234 1234 1234 1234

**Options :**

485584134801. 1

485584134802. 2

485584134803. 3

485584134804. 4

**Question Number : 337 Question Id : 48558433702 Question Type : MCQ Option Shuffling : No Is Question Mandatory : No Calculator : None Response Time : N.A Think Time : N.A Minimum Instruction Time : 0**

**Correct Marks : 5 Wrong Marks : 1**

**Question Key Details :**

Key	Value
Comprehension	MCQ3

Syahi (ink) appearing in the Mridangam bears the color:

1. Green
2. Red
3. Black
4. Yellow

**Options :**

485584134805. 1  
485584134806. 2  
485584134807. 3  
485584134808. 4

**Question Number : 337 Question Id : 48558433702 Question Type : MCQ Option Shuffling : No Is Question Mandatory : No Calculator : None Response Time : N.A Think Time : N.A Minimum Instruction Time : 0**

**Correct Marks : 5 Wrong Marks : 1**

**Question Key Details :**

Key	Value
Comprehension	MCQ3

ਮ੍ਰਿਦਨਗਮ ਵਿੱਚ ਦਿਖਾਈ ਦੇਣ ਵਾਲੀ ਸਿਆਹੀ ਦਾ ਕਿਹੜਾ ਰੰਗ ਹੈ?

1. ਹਰਾ
2. ਲਾਲ
3. ਕਾਲਾ
4. ਪੀਲਾ

**Options :**

485584134805. 1  
485584134806. 2  
485584134807. 3  
485584134808. 4

**Question Number : 338 Question Id : 48558433703 Question Type : MCQ Option Shuffling : No Is Question Mandatory : No Calculator : None Response Time : N.A Think Time : N.A Minimum Instruction Time : 0**

**Correct Marks : 5 Wrong Marks : 1**

**Question Key Details :**

Key	Value
Comprehension	MCQ3

Identify the Tala:

Ka, dhe, Te, Dhe Te dhaa S .....

1. Teentala
2. Chartala
3. Dhamar
4. Jhampatala

**Options :**

485584134809. 1  
485584134810. 2  
485584134811. 3  
485584134812. 4

**Question Number : 338 Question Id : 48558433703 Question Type : MCQ Option Shuffling : No Is Question Mandatory : No Calculator : None Response Time : N.A Think Time : N.A Minimum Instruction Time : 0**

**Correct Marks : 5 Wrong Marks : 1**

**Question Key Details :**

Key	Value
Comprehension	MCQ3

ਤਾਲ ਨੂੰ ਪਛਾਣੋ ?

ਕਾ, ਧੇ, ਤੇ, ਧੀ, ਤੇ, ਧਾ, ਸ .....

1. ਤੀਨਤਾਲ
2. ਚਾਰਤਾਲ
3. ਧਮਰ
4. ਝਪਤਾਲ

**Options :**

485584134809. 1  
485584134810. 2  
485584134811. 3  
485584134812. 4

**Question Number : 339 Question Id : 48558433704 Question Type : MCQ Option Shuffling : No Is Question Mandatory : No Calculator : None Response Time : N.A Think Time : N.A Minimum Instruction Time : 0**

**Correct Marks : 5 Wrong Marks : 1**

**Question Key Details :**

Key	Value
Comprehension	MCQ3

'Baddhi' of Tabla is made up of:

1. String
2. Leather
3. Metal
4. Iron

**Options :**

485584134813. 1  
485584134814. 2  
485584134815. 3  
485584134816. 4

**Question Number : 339 Question Id : 48558433704 Question Type : MCQ Option Shuffling : No Is Question Mandatory : No Calculator : None Response Time : N.A Think Time : N.A Minimum Instruction Time : 0**

**Correct Marks : 5 Wrong Marks : 1**

**Question Key Details :**

Key	Value
Comprehension	MCQ3

ਤਬਲੇ ਦੀ " ਬੱਧੀ " ਬਣੀ ਹੋਈ ਹੈ?

1. ਤਾਰ / ਡੋਰੀ / ਰੱਸੀ
2. ਚਮੜਾ
3. ਧਾਤੂ
4. ਲੋਹਾ

**Options :**

485584134813. 1  
485584134814. 2  
485584134815. 3  
485584134816. 4

**Question Number : 340 Question Id : 48558433705 Question Type : MCQ Option Shuffling : No Is Question Mandatory : No Calculator : None Response Time : N.A Think Time : N.A Minimum Instruction Time : 0**

**Correct Marks : 5 Wrong Marks : 1**

**Question Key Details :**

Key	Value
Comprehension	MCQ3

Match List I with List II

LIST I		LIST II	
Revelations (Bal)		Tala	
A.	Dhi Na Dhi Dhi Na	I.	Teental
B.	Dha Dhin Dhin Dha	II.	Jhaptal
C.	Ti Ti Na	III.	Dadra
D.	Dha Dhi Na	IV.	Rupak

Choose the correct answer from the options given below:

1. A-I, B-III, C-II, D-IV
2. A-III, B-II, C-I, D-IV
3. A-IV, B-III, C-II, D-I
4. A-II, B-I, C-IV, D-III

**Options :**

485584134817. 1  
 485584134818. 2  
 485584134819. 3  
 485584134820. 4

**Question Number : 340 Question Id : 48558433705 Question Type : MCQ Option Shuffling : No Is Question Mandatory : No Calculator : None Response Time : N.A Think Time : N.A Minimum Instruction Time : 0**

**Correct Marks : 5 Wrong Marks : 1**

**Question Key Details :**

Key	Value
Comprehension	MCQ3

ਸੂਚੀ I ਦਾ ਸੂਚੀ II ਨਾਲ ਮਿਲਾਣ ਕਰੋ:

ਸੂਚੀ I		ਸੂਚੀ II	
ਖੁਲਾਸਾ (ਬਲ)		ਤਾਲ	
A.	ਧੀ, ਨਾ, ਧੀ, ਧੀ, ਨਾ	I.	ਤੀਨਤਾਲ
B.	ਧਾ, ਧਿਨ, ਧਿਨ, ਧਾ	II.	ਝਪਤਾਲ
C.	ਤੀ, ਤੀ, ਨਾ	III.	ਦਾਦਰਾ
D.	ਧਾ, ਧੀ, ਨਾ	IV.	ਰੂਪਕ

ਹੇਠਾਂ ਦਿੱਤੇ ਵਿਕਲਪਾਂ ਵਿੱਚੋਂ ਸਹੀ ਉੱਤਰ ਚੁਣੋ:

1. A-I, B-III, C-II, D-IV
2. A-III, B-II, C-I, D-IV
3. A-IV, B-III, C-II, D-I
4. A-II, B-I, C-IV, D-III

**Options :**

485584134817. 1  
 485584134818. 2

485584134819. 3

485584134820. 4

**Question Number : 341 Question Id : 48558433706 Question Type : MCQ Option Shuffling : No Is Question Mandatory : No Calculator : None Response Time : N.A Think Time : N.A Minimum Instruction Time : 0**

**Correct Marks : 5 Wrong Marks : 1**

**Question Key Details :**

Key	Value
Comprehension	MCQ3

Match List I with List II

LIST I		LIST II	
	Bandish	(Instruments) Vadya	
A.	Kayada	I.	Pakhawaj
B.	Stuti Paran	II.	Sitar
C.	Razakhani Gat	III.	Tabla
D.	Aamad	IV.	Kathak

Choose the correct answer from the options given below:

1. A-III, B-I, C-II, D-IV

2. A-II, B-III, C-IV, D-I

3. A-I, B-II, C-III, D-IV

4. A-IV, B-III, C-I, D-II

**Options :**

485584134821. 1

485584134822. 2

485584134823. 3

485584134824. 4

**Question Number : 341 Question Id : 48558433706 Question Type : MCQ Option Shuffling : No Is Question Mandatory : No Calculator : None Response Time : N.A Think Time : N.A Minimum Instruction Time : 0**

**Correct Marks : 5 Wrong Marks : 1**

**Question Key Details :**

Key	Value
Comprehension	MCQ3

ਸੂਚੀ I ਦਾ ਸੂਚੀ II ਨਾਲ ਮਿਲਾਣ ਕਰੋ:

ਸੂਚੀ I		ਸੂਚੀ II	
ਬੰਦਿਸ਼		(ਯੰਤਰ) ਵਾਦਯ	
A.	ਕਜਾਦਾ	I.	ਪੱਖਵਾਜ਼
B.	ਸਤੁਤੀ ਪ੍ਰਾਨ	II.	ਸਿਤਾਰ
C.	ਰਾਜ਼ਾਖਾਨੀ ਰਾਤ	III.	ਤਬਲਾ
D.	ਆਮਦ	IV.	ਕਬੱਕਾ

ਹੇਠਾਂ ਦਿੱਤੇ ਵਿਕਲਪਾਂ ਵਿੱਚੋਂ ਸਹੀ ਉੱਤਰ ਚੁਣੋ:

1. A-III, B-I, C-II, D-IV
2. A-II, B-III, C-IV, D-I
3. A-I, B-II, C-III, D-IV
4. A-IV, B-III, C-I, D-II

**Options :**

485584134821. 1  
485584134822. 2  
485584134823. 3  
485584134824. 4

**Question Number : 342 Question Id : 48558433707 Question Type : MCQ Option Shuffling : No Is Question Mandatory : No Calculator : None Response Time : N.A Think Time : N.A Minimum Instruction Time : 0**

**Correct Marks : 5 Wrong Marks : 1**

**Question Key Details :**

Key	Value
Comprehension	MCQ3

Which among the following are played on Pakhawaj?

- A. Stuti Paran
- B. Tukda
- C. Rela
- D. Kayada
- E. Chakradar

Choose the correct answer from the options given below:

1. A, C and E
2. A, B and D
3. A, D and E
4. A, B and C

**Options :**

485584134825. 1  
485584134826. 2  
485584134827. 3



485584134828. 4

**Question Number : 342 Question Id : 48558433707 Question Type : MCQ Option Shuffling : No Is Question Mandatory : No Calculator : None Response Time : N.A Think Time : N.A Minimum Instruction Time : 0**

**Correct Marks : 5 Wrong Marks : 1**

**Question Key Details :**

Key	Value
Comprehension	MCQ3

ਪੱਖਵਾਜ਼ ਦੇ ਵਜਾਉਣ ਦੇ ਕੋਰਸ ਵਿੱਚ ਕ੍ਰਮਵਾਰ ਕ੍ਰਮ ਹੈ?

- A. ਸਤੁਤੀ
- B. ਟੁਕੜਾ
- C. ਰੇਲਾ
- D. ਕਿਆਦਾ
- E. ਚੱਕਰਕਾਰ

ਹੇਠਾਂ ਦਿੱਤੇ ਵਿਕਲਪਾਂ ਵਿੱਚੋਂ ਸਹੀ ਉੱਤਰ ਚੁਣੋ:

- 1. A, C ਅਤੇ E
- 2. A, B ਅਤੇ D
- 3. A, D ਅਤੇ E
- 4. A, B ਅਤੇ C

**Options :**

- 485584134825. 1
- 485584134826. 2
- 485584134827. 3
- 485584134828. 4

**Question Number : 343 Question Id : 48558433708 Question Type : MCQ Option Shuffling : No Is Question Mandatory : No Calculator : None Response Time : N.A Think Time : N.A Minimum Instruction Time : 0**

**Correct Marks : 5 Wrong Marks : 1**

**Question Key Details :**

Key	Value
Comprehension	MCQ3

Select correct sequence of Tabla Players on the basis of their seniority.

- A. Kishan Maharaj
- B. Zakir Hussain
- C. Chotey Lal Mishra
- D. Ramji Mishra
- E. Ram Kumar Mishra

Choose the correct answer from the options given below:

- 1. A, C, D, B, E
- 2. A, B, C, D, E
- 3. A, D, E, C, B
- 4. A, E, D, C, B

**Options :**

- 485584134829. 1
- 485584134830. 2
- 485584134831. 3
- 485584134832. 4

**Question Number : 343 Question Id : 48558433708 Question Type : MCQ Option Shuffling : No Is Question Mandatory : No Calculator : None Response Time : N.A Think Time : N.A Minimum Instruction Time : 0**

**Correct Marks : 5 Wrong Marks : 1**

**Question Key Details :**

Key	Value
Comprehension	MCQ3

ਤਬਲਾ ਵਾਦਕਾਂ ਦੀ ਵਰਿਸ਼ਠਤਾ / ਸਿਨਿਅਾਰਿਟੀ ਦੇ ਆਧਾਰ ਤੇ ਸਹੀ ਲੜੀ ਦੀ ਚੋਣ ਕਰੋ?

- A. ਕਿਸ਼ਨ ਮਹਾਰਾਜ
- B. ਜ਼ਾਕਿਰ ਹੁਸੈਨ
- C. ਛੋਟੇ ਲਾਲ ਮਿਸ਼ਰਾ
- D. ਰਾਮ ਜੀ ਮਿਸ਼ਰਾ
- E. ਰਾਮ ਕੁਮਾਰ ਮਿਸ਼ਰਾ

ਹੇਠਾਂ ਦਿੱਤੇ ਵਿਕਲਪਾਂ ਵਿੱਚੋਂ ਸਹੀ ਉੱਤਰ ਚੁਣੋ:

- 1. A, C, D, B, E
- 2. A, B, C, D, E
- 3. A, D, E, C, B
- 4. A, E, D, C, B

**Options :**

- 485584134829. 1
- 485584134830. 2
- 485584134831. 3
- 485584134832. 4

**Question Number : 344 Question Id : 48558433709 Question Type : MCQ Option Shuffling : No Is Question Mandatory : No Calculator : None Response Time : N.A Think Time : N.A Minimum Instruction Time : 0**

**Correct Marks : 5 Wrong Marks : 1**

**Question Key Details :**

Key	Value
Comprehension	MCQ3

Which instruments (Vadya) are played during 'Bhajan' singing?

- A. Tabla
- B. Surbahar
- C. Pakhawaj
- D. Drum
- E. Harmonium

Choose the correct answer from the options given below:

- 1. A, B and C
- 2. A, C and E
- 3. A, D and B
- 4. B, D and E

**Options :**

- 485584134833. 1
- 485584134834. 2
- 485584134835. 3
- 485584134836. 4

**Question Number : 344 Question Id : 48558433709 Question Type : MCQ Option Shuffling : No Is Question Mandatory : No Calculator : None Response Time : N.A Think Time : N.A Minimum Instruction Time : 0**

**Correct Marks : 5 Wrong Marks : 1**

**Question Key Details :**

Key	Value
Comprehension	MCQ3

ਭਜਨ ਗਾਇਨ ਦੇ ਦੌਰਾਨ ਕਿਹੜਾ ਸਾਜ ਵਜਾਇਆ ਜਾਂਦਾ ਹੈ?

- A. ਤਬਲਾ
- B. ਸੁਰਬਹਾਰ
- C. ਪੱਖਵਾਜ਼
- D. ਡਰੱਮ
- E. ਹਰਮੋਨੀਅਮ

ਹੇਠਾਂ ਦਿੱਤੇ ਵਿਕਲਪਾਂ ਵਿੱਚੋਂ ਸਹੀ ਉੱਤਰ ਚੁਣੋ:

1. A, B ਅਤੇ C
2. A, C ਅਤੇ E
3. A, D ਅਤੇ B
4. B, D ਅਤੇ E

**Options :**

- 485584134833. 1
- 485584134834. 2
- 485584134835. 3
- 485584134836. 4

**Question Number : 345 Question Id : 48558433710 Question Type : MCQ Option Shuffling : No Is Question Mandatory : No Calculator : None Response Time : N.A Think Time : N.A Minimum Instruction Time : 0 Correct Marks : 5 Wrong Marks : 1**

**Question Key Details :**

Key	Value
Comprehension	MCQ3

Which of the following are Tabla Gharanas?

- A. Delhi
- B. Culcutta
- C. Ajrada
- D. Jaipur
- E. Farukhabad

Choose the correct answer from the options given below:

1. A, B and D
2. A, D and E
3. A, C and E
4. A, E and C

**Options :**

- 485584134837. 1
- 485584134838. 2
- 485584134839. 3
- 485584134840. 4

Question Number : 345 Question Id : 48558433710 Question Type : MCQ Option Shuffling : No Is Question Mandatory : No Calculator : None Response Time : N.A Think Time : N.A Minimum Instruction Time : 0

Correct Marks : 5 Wrong Marks : 1

Question Key Details :

Key	Value
Comprehension	MCQ3

ਤਬਲਾ ਘਰਾਣੇ ਦੇ ਕਰਮ ਦੀ ਪਛਾਣ ਕਰੋ?

1. ਦਿੱਲੀ
2. ਕਲੱਕਤਾ
3. ਅਜਰਾਦਾ
4. ਫ਼ਾਰੂਖਾਬਾਦ

Options :

485584134837. 1  
485584134838. 2  
485584134839. 3  
485584134840. 4

## Drama And Theatre

Section Id :	485584866
Section Number :	5
Section type :	Online
Mandatory or Optional :	Optional
Number of Questions :	25
Number of Questions to be attempted :	20
Section Marks :	100
Enable Mark as Answered Mark for Review and Clear Response :	Yes
Maximum Instruction Time :	0
Sub-Section Number :	1
Sub-Section Id :	4855842441
Question Shuffling Allowed :	Yes
Is Section Default? :	null

Question Number : 346 Question Id : 48558433711 Question Type : MCQ Option Shuffling : No Is Question Mandatory : No Calculator : None Response Time : N.A Think Time : N.A Minimum Instruction Time : 0

Correct Marks : 5 Wrong Marks : 1

Question Key Details :

Key	Value
Comprehension	MCQ4

In which sanskrit drama of Bhasa the curse of Parshurama plays an important role?

1. Madhyama Vyayoga
2. Karnabharam
3. Urubhangam
4. Dutavakyam

**Options :**

485584134841. 1  
485584134842. 2  
485584134843. 3  
485584134844. 4

**Question Number : 346 Question Id : 48558433711 Question Type : MCQ Option Shuffling : No Is Question Mandatory : No Calculator : None Response Time : N.A Think Time : N.A Minimum Instruction Time : 0**

**Correct Marks : 5 Wrong Marks : 1**

**Question Key Details :**

Key	Value
Comprehension	MCQ4

ਕਿਹੜੇ ਭਾਸ਼ਾ ਦੇ ਸੰਸਕ੍ਰਿਤ ਨਾਟਕ ਵਿੱਚ ਪਰਸ਼ੁਰਾਮ ਦਾ ਸਰਾਪ ਇੱਕ ਮਹੱਤਵਪੂਰਨ ਭੂਮਿਕਾ ਨਿਭਾਉਂਦਾ ਹੈ?

1. ਮੱਧਅਮਾ ਵਿਆਯੋਗ
2. ਕਰਨਾਭਰਮ
3. ਉਰੂਭੰਗਮ
4. ਦੁਤਵਕਯਮ

**Options :**

485584134841. 1  
485584134842. 2  
485584134843. 3  
485584134844. 4

**Question Number : 347 Question Id : 48558433712 Question Type : MCQ Option Shuffling : No Is Question Mandatory : No Calculator : None Response Time : N.A Think Time : N.A Minimum Instruction Time : 0**

**Correct Marks : 5 Wrong Marks : 1**

**Question Key Details :**

Key	Value
Comprehension	MCQ4

In which sanskrit drama Charudatta and Vasantsena appears as Nayaka and Nayika?

1. Svapna Vasavadattam
2. Mahaveer Charitam
3. Mricchakatikam
4. Abhijnanshakuntalam

**Options :**

485584134845. 1  
485584134846. 2  
485584134847. 3  
485584134848. 4

**Question Number : 347 Question Id : 48558433712 Question Type : MCQ Option Shuffling : No Is Question Mandatory : No Calculator : None Response Time : N.A Think Time : N.A Minimum Instruction Time : 0**

**Correct Marks : 5 Wrong Marks : 1**

**Question Key Details :**

Key	Value
Comprehension	MCQ4

ਕਿਹੜੇ ਸੰਸਕ੍ਰਿਤ ਨਾਟਕ ਵਿੱਚ ਚਾਰੂਕੱਤ ਅਤੇ ਵਸੰਤਸੈਨਾ ਨਾਇਕ ਤੇ ਨਾਇਕਾ ਦੇ ਰੂਪ ਵਿੱਚ ਪ੍ਰਗਟ ਹੁੰਦਾ ਹੈ?

1. ਸ਼੍ਰਾਨਾ ਵਾਸਵਾਦੱਤਮ
2. ਮਹਾਵੀਰ ਚਰਿੱਤਮ
3. ਮਰੀਚਕਤੀਕਮ
4. ਅਭੀਜਨਨ ਸਕੁੰਤਲਮ

**Options :**

485584134845. 1  
485584134846. 2  
485584134847. 3  
485584134848. 4

**Question Number : 348 Question Id : 48558433713 Question Type : MCQ Option Shuffling : No Is Question Mandatory : No Calculator : None Response Time : N.A Think Time : N.A Minimum Instruction Time : 0**

**Correct Marks : 5 Wrong Marks : 1**

**Question Key Details :**

Key	Value
Comprehension	MCQ4

The traditional Theatre Form created by the great religious thinker and reformer Shankardeva of Assam is known as:

1. Ankia Nat
2. Rasaleela
3. Krishnattam
4. Chhau

**Options :**

485584134849. 1  
485584134850. 2  
485584134851. 3  
485584134852. 4

**Question Number : 348 Question Id : 48558433713 Question Type : MCQ Option Shuffling : No Is Question Mandatory : No Calculator : None Response Time : N.A Think Time : N.A Minimum Instruction Time : 0**

**Correct Marks : 5 Wrong Marks : 1**

**Question Key Details :**

Key	Value
Comprehension	MCQ4

ਆਸਮ ਦੇ ਮਹਾਨ ਧਾਰਮਿਕ ਚਿੰਤਕ ਅਤੇ ਸੁਧਾਰਕ ਸ਼ੰਕਰਾਦੇਵਾ ਦੁਆਰਾ ਰਚਿਆ ਗਿਆ ਰਵਾਇਤੀ ਥੀਏਟਰ ਕਿਸ ਰੂਪ ਵਜੋਂ ਜਾਣਿਆ ਜਾਂਦਾ ਹੈ?

1. ਅੰਕਿਯਾ ਨੱਤ
2. ਰਸਲੀਤਾ
3. ਕ੍ਰਿਸ਼ਨਾਤਮ
4. ਛਾਉ

**Options :**

485584134849. 1  
485584134850. 2  
485584134851. 3  
485584134852. 4

**Question Number : 349 Question Id : 48558433714 Question Type : MCQ Option Shuffling : No Is Question Mandatory : No Calculator : None Response Time : N.A Think Time : N.A Minimum Instruction Time : 0**

**Correct Marks : 5 Wrong Marks : 1**

**Question Key Details :**

Key	Value
Comprehension	MCQ4



'Jokumarswami', the famous Kannada play is written by -

1. Girish Karnad
2. Adya Rangacharya
3. Chandrasekhar Kambar
4. H. S. Shivaprakash

**Options :**

485584134853. 1  
485584134854. 2  
485584134855. 3  
485584134856. 4

**Question Number : 349 Question Id : 48558433714 Question Type : MCQ Option Shuffling : No Is Question Mandatory : No Calculator : None Response Time : N.A Think Time : N.A Minimum Instruction Time : 0**

**Correct Marks : 5 Wrong Marks : 1**

**Question Key Details :**

Key	Value
Comprehension	MCQ4

" ਜੇਕੁਮਾਰ ਸੁਆਮੀ " ਇੱਕ ਪ੍ਰਸਿੱਧ ਕਨੱਡ ਨਾਟਕ ਕਿਸ ਦੁਆਰਾ ਲਿਖਿਆ ਗਿਆ?

1. ਗਿਰੀਸ਼ ਕਰਨਰਡ
2. ਆਦਯਾ ਰੰਗਚਾਰਯ
3. ਚੰਦਰਸ਼ੇਖਰ ਕੰਬਰ
4. ਐਚ. ਐਸ. ਸ਼ਿਵਾਪ੍ਰਕਾਸ਼

**Options :**

485584134853. 1  
485584134854. 2  
485584134855. 3  
485584134856. 4

**Question Number : 350 Question Id : 48558433715 Question Type : MCQ Option Shuffling : No Is Question Mandatory : No Calculator : None Response Time : N.A Think Time : N.A Minimum Instruction Time : 0**

**Correct Marks : 5 Wrong Marks : 1**

**Question Key Details :**

Key	Value
Comprehension	MCQ4

The famous Hindi play 'Adhe Adhure' which depicts the crisis of values faced by the middle class family, is written by:

1. Mohan Rakesh
2. Surendra Varma
3. Shankar Shesh
4. Mani Madhukar

**Options :**

485584134857. 1  
485584134858. 2  
485584134859. 3  
485584134860. 4

**Question Number : 350 Question Id : 48558433715 Question Type : MCQ Option Shuffling : No Is Question Mandatory : No Calculator : None Response Time : N.A Think Time : N.A Minimum Instruction Time : 0**

**Correct Marks : 5 Wrong Marks : 1**

**Question Key Details :**

Key	Value
Comprehension	MCQ4

ਪ੍ਰਸਿੱਧ ਹਿੰਦੀ ਨਾਟਕ ਆਧੇ ਅਧੂਰੇ ਜਿਸ ਵਿੱਚ ਮੱਧ ਵਰਗ ਪਰਿਵਾਰ ਦੀਆਂ ਕਦਰਾਂ ਕੀਮਤਾਂ ਦੇ ਸੰਕਟ ਦਾ ਸਾਹਮਣਾ ਕੀਤਾ ਗਿਆ ਹੈ, ਉਹ ਕਿਸ ਦੁਆਰਾ ਲਿਖਿਆ ਗਿਆ ਹੈ?

1. ਮੋਹਨ ਰਾਕੇਸ਼
2. ਸੁਰੇਂਦਰ ਵਰਮਾ
3. ਸ਼ੰਕਰ ਸ਼ੇਸ਼
4. ਮਨੀ ਮਧੁਕਰ

**Options :**

485584134857. 1  
485584134858. 2  
485584134859. 3  
485584134860. 4

**Question Number : 351 Question Id : 48558433716 Question Type : MCQ Option Shuffling : No Is Question Mandatory : No Calculator : None Response Time : N.A Think Time : N.A Minimum Instruction Time : 0**

**Correct Marks : 5 Wrong Marks : 1**

**Question Key Details :**

Key	Value
Comprehension	MCQ4

The Director who is famous for directing Mahakavi Bhasa plays :

1. Jabbar Patel
2. K. N. Pannikar
3. Pravin Joshi
4. Rajendar Nath

**Options :**

485584134861. 1  
485584134862. 2  
485584134863. 3  
485584134864. 4

**Question Number : 351 Question Id : 48558433716 Question Type : MCQ Option Shuffling : No Is Question Mandatory : No Calculator : None Response Time : N.A Think Time : N.A Minimum Instruction Time : 0**

**Correct Marks : 5 Wrong Marks : 1**

**Question Key Details :**

Key	Value
Comprehension	MCQ4

ਉਹ ਨਿਰਦੇਸ਼ਕ ਜੋ ਮਹਾਕਵੀ ਭਾਸ਼ਾ ਨਾਟਕਾਂ ਦੇ ਨਿਰਦੇਸ਼ਨ ਲਈ ਮਸ਼ਹੂਰ ਹੈ?

1. ਜਬੱਰ ਪਟੇਲ
2. ਕੇ. ਐਨ. ਪਾਨੀਕਰ
3. ਪਰਵੀਨ ਜੋਸ਼ੀ
4. ਰਜੇਂਦਰ ਨਾਥ

**Options :**

485584134861. 1  
485584134862. 2  
485584134863. 3  
485584134864. 4

**Question Number : 352 Question Id : 48558433717 Question Type : MCQ Option Shuffling : No Is Question Mandatory : No Calculator : None Response Time : N.A Think Time : N.A Minimum Instruction Time : 0**

**Correct Marks : 5 Wrong Marks : 1**

**Question Key Details :**

Key	Value
Comprehension	MCQ4

'Hypokrites' is a Greek word meaning:

1. Actor
2. Director
3. Producer
4. Playwright

**Options :**

485584134865. 1  
485584134866. 2  
485584134867. 3  
485584134868. 4

**Question Number : 352 Question Id : 48558433717 Question Type : MCQ Option Shuffling : No Is Question Mandatory : No Calculator : None Response Time : N.A Think Time : N.A Minimum Instruction Time : 0**

**Correct Marks : 5 Wrong Marks : 1**

**Question Key Details :**

Key	Value
Comprehension	MCQ4

" ਹਾਈਪੋਕਰਾਈਟਸ "ਇੱਕ ਗ੍ਰੀਕ ਸ਼ਬਦ ਹੈ, ਉਸ ਦਾ ਅਰਥ ਹੈ?

1. ਅਭਿਨੈ ਕਰਨ ਵਾਲਾ
2. ਨਿਰਦੇਸ਼ਕ
3. ਨਿਰਮਾਤਾ
4. ਨਾਟਕਕਾਰ

**Options :**

485584134865. 1  
485584134866. 2  
485584134867. 3  
485584134868. 4

**Question Number : 353 Question Id : 48558433718 Question Type : MCQ Option Shuffling : No Is Question Mandatory : No Calculator : None Response Time : N.A Think Time : N.A Minimum Instruction Time : 0**

**Correct Marks : 5 Wrong Marks : 1**

**Question Key Details :**

Key	Value
Comprehension	MCQ4

The only surviving Greek Trilogy is 'Aeschylus' -

1. The Persians
2. The Orestia
3. Agamemnon
4. The Eumenides

**Options :**

485584134869. 1  
485584134870. 2  
485584134871. 3  
485584134872. 4

**Question Number : 353 Question Id : 48558433718 Question Type : MCQ Option Shuffling : No Is Question Mandatory : No Calculator : None Response Time : N.A Think Time : N.A Minimum Instruction Time : 0**

**Correct Marks : 5 Wrong Marks : 1**

**Question Key Details :**

Key	Value
Comprehension	MCQ4

ਇਹ / ਐ ਸਚਿਲਮ ਇੱਕ ਬਚੀ ਹੋਈ ਯੂਨਾਨੀ ਤਿਕੜੀ ਹੈ?

1. ਦ ਪਰਸ਼ੀਅਨ
2. ਦ ਉਰੇਸਟੀਆ
3. ਅਗਾਮੇਮਨਨ
4. ਦ ਯੂਮੇਨਾਈਡਜ਼

**Options :**

485584134869. 1  
485584134870. 2  
485584134871. 3  
485584134872. 4

**Question Number : 354 Question Id : 48558433719 Question Type : MCQ Option Shuffling : No Is Question Mandatory : No Calculator : None Response Time : N.A Think Time : N.A Minimum Instruction Time : 0**

**Correct Marks : 5 Wrong Marks : 1**

**Question Key Details :**

Key	Value
Comprehension	MCQ4

Who among the following is NOT an acclaimed Shakespearean actor?

1. Charles Kean
2. Henry Irving
3. James Burbage
4. Laurence Olivier

**Options :**

485584134873. 1  
485584134874. 2  
485584134875. 3  
485584134876. 4

**Question Number : 354 Question Id : 48558433719 Question Type : MCQ Option Shuffling : No Is Question Mandatory : No Calculator : None Response Time : N.A Think Time : N.A Minimum Instruction Time : 0**

**Correct Marks : 5 Wrong Marks : 1**

**Question Key Details :**

Key	Value
Comprehension	MCQ4

ਹੇਠ ਲਿਖਿਆਂ ਵਿੱਚੋਂ ਕਿਹੜਾ ਸ਼ੇਕਸਪੀਰੀਅਨ ਅਭਿਨੈ ਦਾ ਦਾਅਵੇਦਾਰ ਨਹੀਂ ਹੈ?

1. ਚਾਰਲਸ ਕੀਨ
2. ਹੈਨਰੀ ਇਰਵਿੰਗ
3. ਜੇਮਸ ਬਰਬੇਗ
4. ਲਾਰੰਸ ਉਲੀਵਰ

**Options :**

485584134873. 1  
485584134874. 2  
485584134875. 3  
485584134876. 4

**Question Number : 355 Question Id : 48558433720 Question Type : MCQ Option Shuffling : No Is Question Mandatory : No Calculator : None Response Time : N.A Think Time : N.A Minimum Instruction Time : 0**

**Correct Marks : 5 Wrong Marks : 1**

**Question Key Details :**

Key	Value
Comprehension	MCQ4

Which among the following plays is written by Anton Chekhov?

1. The Lower Depths
2. The Lesson
3. The Seagull
4. The Weavers

**Options :**

485584134877. 1  
485584134878. 2  
485584134879. 3  
485584134880. 4

**Question Number : 355 Question Id : 48558433720 Question Type : MCQ Option Shuffling : No Is Question Mandatory : No Calculator : None Response Time : N.A Think Time : N.A Minimum Instruction Time : 0**

**Correct Marks : 5 Wrong Marks : 1**

**Question Key Details :**

Key	Value
Comprehension	MCQ4

ਹੇਠ ਲਿਖਿਆਂ ਵਿੱਚੋਂ ਕਿਹੜੇ ਨਾਟਕ ਏਨਟਨ ਚੈਖੋਵ ਦੁਆਰਾ ਲਿਖੇ ਗਏ?

1. ਦ ਲੋਅਰ ਡੇਪਥ
2. ਦ ਲੇਸਨ ( ਪਾਠ )
3. ਦ ਸੀਗੁਲ ( ਸਮੁੰਦਰੀ ਚਿੜੀਆ )
4. ਦ ਵਿਵਰਜ ( ਜੁਲਾਰਾ )

**Options :**

485584134877. 1  
485584134878. 2  
485584134879. 3  
485584134880. 4

**Question Number : 356 Question Id : 48558433721 Question Type : MCQ Option Shuffling : No Is Question Mandatory : No Calculator : None Response Time : N.A Think Time : N.A Minimum Instruction Time : 0**

**Correct Marks : 5 Wrong Marks : 1**

**Question Key Details :**

Key	Value
Comprehension	MCQ4

Which among the following plays is NOT written by Samuel Beckett?

1. Waiting for Godot
2. Happy days
3. The Birthday Party
4. Endgame

**Options :**

485584134881. 1  
485584134882. 2  
485584134883. 3  
485584134884. 4

**Question Number : 356 Question Id : 48558433721 Question Type : MCQ Option Shuffling : No Is Question Mandatory : No Calculator : None Response Time : N.A Think Time : N.A Minimum Instruction Time : 0**

**Correct Marks : 5 Wrong Marks : 1**

**Question Key Details :**

Key	Value
Comprehension	MCQ4

ਹੇਠ ਲਿਖਿਆਂ ਵਿੱਚੋਂ ਕਿਹੜਾ ਨਾਟਕ ਸੈਮੂਅਲ ਬੈਕੇਟ ਦੁਆਰਾ ਨਹੀਂ ਲਿਖਿਆ ਗਿਆ?

1. ਗਡੋਟ ਲਈ ਇੰਤਜ਼ਾਰ ( ਵੇਟਿੰਗ ਫਾਰ ਗਡੋਟ )
2. ਖੁਸ਼ੀ ਦੇ ਦਿਨ ( ਹੈਪੀ ਡੇਜ਼ )
3. ਜਨਮਦਿਨ ਪਾਰਟੀ ( ਦ ਬਰਥਡੇ ਪਾਰਟੀ )
4. ਐਂਡਗੇਮ

**Options :**

485584134881. 1  
485584134882. 2  
485584134883. 3  
485584134884. 4

**Question Number : 357 Question Id : 48558433722 Question Type : MCQ Option Shuffling : No Is Question Mandatory : No Calculator : None Response Time : N.A Think Time : N.A Minimum Instruction Time : 0**

**Correct Marks : 5 Wrong Marks : 1**

**Question Key Details :**

Key	Value
Comprehension	MCQ4



Meyerhold's contribution to theatre was:

1. Realism
2. Constructivism
3. Alienation
4. Fantastic Realism

**Options :**

485584134885. 1  
485584134886. 2  
485584134887. 3  
485584134888. 4

**Question Number : 357 Question Id : 48558433722 Question Type : MCQ Option Shuffling : No Is Question Mandatory : No Calculator : None Response Time : N.A Think Time : N.A Minimum Instruction Time : 0**

**Correct Marks : 5 Wrong Marks : 1**

**Question Key Details :**

Key	Value
Comprehension	MCQ4

ਮੀਅਰਹੋਲਡ ਦਾ ਥੀਏਟਰ ਵਿੱਚ ਯੋਗਦਾਨ ਸੀ?

1. ਯਥਾਰਵਾਦ
2. ਰਚਨਾਵਾਦ
3. ਐਲੀਨੇਸ਼ਨ
4. ਕੱਟੜ ਯਥਾਰਵਾਦ

**Options :**

485584134885. 1  
485584134886. 2  
485584134887. 3  
485584134888. 4

**Question Number : 358 Question Id : 48558433723 Question Type : MCQ Option Shuffling : No Is Question Mandatory : No Calculator : None Response Time : N.A Think Time : N.A Minimum Instruction Time : 0**

**Correct Marks : 5 Wrong Marks : 1**

**Question Key Details :**

Key	Value
Comprehension	MCQ4

On the Picture Frame stage, the inner proscenium consists of a floor-length side drapes, which are called:

1. Projections
2. Grand draperies
3. Tormentors
4. Teasers

**Options :**

485584134889. 1  
485584134890. 2  
485584134891. 3  
485584134892. 4

**Question Number : 358 Question Id : 48558433723 Question Type : MCQ Option Shuffling : No Is Question Mandatory : No Calculator : None Response Time : N.A Think Time : N.A Minimum Instruction Time : 0**

**Correct Marks : 5 Wrong Marks : 1**

**Question Key Details :**

Key	Value
Comprehension	MCQ4

ਤਸਵੀਰ ਦੇ ਫਰੇਮਸਟੇਜ ਤੇ ਅੰਦਰੂਨੀ ਪ੍ਰਕਿਰਿਆ ਵਿੱਚ ਮੰਜ਼ਿਲ ਦੀ ਲੰਬਾਈ ਵਾਲੇ ਪਾਸੇ ਦੇ ਪਰਦੇ ਹੁੰਦੇ ਹਨ ਜਿਨ੍ਹਾਂ ਨੂੰ ਕਿਹਾ ਜਾਂਦਾ ਹੈ?

1. ਅਨੁਮਾਨ
2. ਗਰੈਂਡ ਡਰੈਪਰੀਆਂ
3. ਤਸੀਹੇ ਦੇਣ ਵਾਲੇ
4. ਛੇੜਨ ਵਾਲੇ

**Options :**

485584134889. 1  
485584134890. 2  
485584134891. 3  
485584134892. 4

**Question Number : 359 Question Id : 48558433724 Question Type : MCQ Option Shuffling : No Is Question Mandatory : No Calculator : None Response Time : N.A Think Time : N.A Minimum Instruction Time : 0**

**Correct Marks : 5 Wrong Marks : 1**

**Question Key Details :**

Key	Value
Comprehension	MCQ4

A fire-retardant curtain that can be lowered to fill the proscenium arch, is called:

1. Front Curtain
2. Asbestos Curtain
3. Back Curtain
4. Cyclorama

**Options :**

485584134893. 1  
485584134894. 2  
485584134895. 3  
485584134896. 4

**Question Number : 359 Question Id : 48558433724 Question Type : MCQ Option Shuffling : No Is Question Mandatory : No Calculator : None Response Time : N.A Think Time : N.A Minimum Instruction Time : 0**

**Correct Marks : 5 Wrong Marks : 1**

**Question Key Details :**

Key	Value
Comprehension	MCQ4

ਇੱਕ ਅੱਗ ਸੰਬੰਧੀ ਪਰਦਾ ਜਿਸਨੂੰ ਪ੍ਰੋਸੈਕੀਅਮ ਆਰਚ ਨੂੰ ਭਰਮ ਲਈ ਹੇਠਾਂ ਕੀਤਾ ਜਾਂਦਾ ਹੈ, ਕਿਹਾ ਜਾਂਦਾ ਹੈ?

1. ਸਾਹਮਣੇ ਦਾ ਪਰਦਾ
2. ਐਸਬੈਸਟਸ ਪਰਦਾ
3. ਪਿਛਲਾ ਪਰਦਾ
4. ਸਾਈਕਲੋਰਾਮਾ

**Options :**

485584134893. 1  
485584134894. 2  
485584134895. 3  
485584134896. 4

**Question Number : 360 Question Id : 48558433725 Question Type : MCQ Option Shuffling : No Is Question Mandatory : No Calculator : None Response Time : N.A Think Time : N.A Minimum Instruction Time : 0**

**Correct Marks : 5 Wrong Marks : 1**

**Question Key Details :**

Key	Value
Comprehension	MCQ4

What is used as foundation or base for the rest of the Makeup?

1. Greasepaint
2. Mascara
3. Rouge
4. Powder

**Options :**

485584134897. 1  
485584134898. 2  
485584134899. 3  
485584134900. 4

**Question Number : 360 Question Id : 48558433725 Question Type : MCQ Option Shuffling : No Is Question Mandatory : No Calculator : None Response Time : N.A Think Time : N.A Minimum Instruction Time : 0**

**Correct Marks : 5 Wrong Marks : 1**

**Question Key Details :**

Key	Value
Comprehension	MCQ4

ਬਾਕੀ ਮੇਕਅਪ ਲਈ ਫਾਊਂਡੇਸ਼ਨ ਜਾਂ ਆਧਾਰ ਵਜੋਂ ਕੀ ਵਰਤਿਆ ਜਾਂਦਾ ਹੈ?

1. ਚਿਕਨਾਈ ਵਾਲੀ ਚੀਜ਼ ਲਗਾਣਾ ( ਗ੍ਰੀਸਪੈਂਟ )
2. ਮਸਕਾਰਾ
3. ਰੂਜ਼
4. ਪਾਊਡਰ

**Options :**

485584134897. 1  
485584134898. 2  
485584134899. 3  
485584134900. 4

**Question Number : 361 Question Id : 48558433726 Question Type : MCQ Option Shuffling : No Is Question Mandatory : No Calculator : None Response Time : N.A Think Time : N.A Minimum Instruction Time : 0**

**Correct Marks : 5 Wrong Marks : 1**

**Question Key Details :**

Key	Value
Comprehension	MCQ4

The three plays written by Kalidasa are:

- A. Malvika Agnimitram
- B. Abhijnan Shakuntalam
- C. Svapna Vasavdattam
- D. Vikramorvashiyam
- E. Uttara Ramacharitam

Choose the correct answer from the options given below:

1. D, E and B only
2. A, B and D only
3. B, C and E only
4. C, D and A only

**Options :**

- 485584134901. 1
- 485584134902. 2
- 485584134903. 3
- 485584134904. 4

**Question Number : 361 Question Id : 48558433726 Question Type : MCQ Option Shuffling : No Is Question Mandatory : No Calculator : None Response Time : N.A Think Time : N.A Minimum Instruction Time : 0**

**Correct Marks : 5 Wrong Marks : 1**

**Question Key Details :**

Key	Value
Comprehension	MCQ4

ਕਾਲੀਦਾਸ ਦੁਆਰਾ ਲਿਖੇ ਗਏ ਤਿੰਨ ਨਾਟਕ ਹਨ ?

- A. ਮਾਲਵਿਕਾ ਅਗਨੀਮਿਤਰਮ
- B. ਅਭੀਜਨਨ ਸ਼ਕੁੰਤਲਮ
- C. ਸਵਪਨਾ ਵਾਸਾਵਦੇਤੱਮ
- D. ਵਿਕਰਮਔਰ ਵਸ਼ੀਅਮ
- E. ਉੱਤਰਾ ਰਾਮਚਰਿਤਮ

ਹੇਠਾਂ ਦਿੱਤੇ ਵਿਕਲਪਾਂ ਵਿੱਚੋਂ ਸਹੀ ਉੱਤਰ ਚੁਣੋ:

1. ਸਿਰਫ਼ D, E ਅਤੇ B
2. ਸਿਰਫ਼ A, B ਅਤੇ D
3. ਸਿਰਫ਼ B, C ਅਤੇ E
4. ਸਿਰਫ਼ C, D ਅਤੇ A

**Options :**

- 485584134901. 1
- 485584134902. 2
- 485584134903. 3
- 485584134904. 4

**Question Number : 362 Question Id : 48558433727 Question Type : MCQ Option Shuffling : No Is Question Mandatory : No Calculator : None Response Time : N.A Think Time : N.A Minimum Instruction Time : 0**

**Correct Marks : 5 Wrong Marks : 1**

**Question Key Details :**

Key	Value
Comprehension	MCQ4

The three famous plays written by Rabindranath Tagore are:

- A. Visarjan
- B. Rajdarshan
- C. Dakghar
- D. Nabanna
- E. Muktheadhara

Choose the correct answer from the options given below:

- 1. D, A and C only
- 2. A, C and E only
- 3. B, D and A only
- 4. C, E and B only

**Options :**

- 485584134905. 1
- 485584134906. 2
- 485584134907. 3
- 485584134908. 4

**Question Number : 362 Question Id : 48558433727 Question Type : MCQ Option Shuffling : No Is Question Mandatory : No Calculator : None Response Time : N.A Think Time : N.A Minimum Instruction Time : 0**

**Correct Marks : 5 Wrong Marks : 1**

**Question Key Details :**

Key	Value
Comprehension	MCQ4

ਤਿੰਨ ਪ੍ਰਸਿੱਧ ਨਾਟਕ ਜੋ ਰਵਿੰਦਰਨਾਥ ਟੈਗੋਰ ਦੁਆਰਾ ਲਿਖੇ ਗਏ?

- A. ਵਿਸਰਜਨ
- B. ਰਾਜਦਰਸ਼ਨ
- C. ਡਾਕ ਘਰ
- D. ਨਬਾਨਾ
- E. ਮੁਰਤਾਧਾਰਾ

ਹੇਠਾਂ ਦਿੱਤੇ ਵਿਕਲਪਾਂ ਵਿੱਚੋਂ ਸਹੀ ਉੱਤਰ ਚੁਣੋ:

1. ਸਿਰਫ਼ D, A ਅਤੇ C
2. ਸਿਰਫ਼ A, C ਅਤੇ E
3. ਸਿਰਫ਼ B, D ਅਤੇ A
4. ਸਿਰਫ਼ C, E ਅਤੇ B

**Options :**

- 485584134905. 1
- 485584134906. 2
- 485584134907. 3
- 485584134908. 4

**Question Number : 363 Question Id : 48558433728 Question Type : MCQ Option Shuffling : No Is Question Mandatory : No Calculator : None Response Time : N.A Think Time : N.A Minimum Instruction Time : 0**

**Correct Marks : 5 Wrong Marks : 1**

**Question Key Details :**

Key	Value
Comprehension	MCQ4

Identify from the following the three Shakespearean Comedies:

- A. Julius Caesar
- B. The Comedy of Errors
- C. The Two Gentlemen of Verona
- D. The Taming of the Shrew
- E. King Lear

Choose the correct answer from the options given below:

1. B, C and D only
2. A, B and C only
3. C, D and E only
4. A, C and E only

**Options :**

- 485584134909. 1
- 485584134910. 2
- 485584134911. 3
- 485584134912. 4

Question Number : 363 Question Id : 48558433728 Question Type : MCQ Option Shuffling : No Is Question Mandatory : No Calculator : None Response Time : N.A Think Time : N.A Minimum Instruction Time : 0

Correct Marks : 5 Wrong Marks : 1

Question Key Details :

Key	Value
Comprehension	MCQ4

ਹੇਠ ਲਿਖਿਆਂ ਵਿੱਚੋਂ ਸ਼ੈਕਸਪੀਅਰ ਦੇ ਤਿੰਨ ਸੁਖਾਤਾਂ / ਪ੍ਰਹਸਨਾ ਨੂੰ ਪਛਾਣੋ?

- A. ਜੂਲੀਅਸ ਸੀਜ਼ਰ
- B. ਦ ਕਾਮੇਡੀ ਆਫ਼ ਏਰਰਸ
- C. ਦ ਟੂ ਜੈਂਟਲਮੈਨ ਆਫ਼ ਵਿਰੇਨਾ
- D. ਦ ਟੈਮਿੰਗ ਆਫ਼ ਦ ਸਰਿਊ
- E. ਕਿੰਗ ਲਿਅਰ

ਹੇਠਾਂ ਦਿੱਤੇ ਵਿਕਲਪਾਂ ਵਿੱਚੋਂ ਸਹੀ ਉੱਤਰ ਚੁਣੋ:

- 1. ਸਿਰਫ਼ B, C ਅਤੇ D
- 2. ਸਿਰਫ਼ A, B ਅਤੇ C
- 3. ਸਿਰਫ਼ C, D ਅਤੇ E
- 4. ਸਿਰਫ਼ A, C ਅਤੇ E

Options :

- 485584134909. 1
- 485584134910. 2
- 485584134911. 3
- 485584134912. 4

Question Number : 364 Question Id : 48558433729 Question Type : MCQ Option Shuffling : No Is Question Mandatory : No Calculator : None Response Time : N.A Think Time : N.A Minimum Instruction Time : 0

Correct Marks : 5 Wrong Marks : 1

Question Key Details :

Key	Value
Comprehension	MCQ4



Identify from among the following, the three plays written by Harold Pinter:

- A. Homecoming
- B. The Caretaker
- C. The Chairs
- D. Endgame
- E. The Birthday Party

Choose the correct answer from the options given below:

1. A, B and E only
2. B, C and A only
3. C, D and B only
4. D, E and A only

**Options :**

- 485584134913. 1
- 485584134914. 2
- 485584134915. 3
- 485584134916. 4

**Question Number : 364 Question Id : 48558433729 Question Type : MCQ Option Shuffling : No Is Question Mandatory : No Calculator : None Response Time : N.A Think Time : N.A Minimum Instruction Time : 0**

**Correct Marks : 5 Wrong Marks : 1**

**Question Key Details :**

Key	Value
Comprehension	MCQ4

ਹੇਠ ਲਿਖਿਆਂ ਵਿੱਚੋਂ ਹਰੋਲਡ ਪਿੰਟਰ ਦੁਆਰਾ ਲਿਖੇ ਗਏ ਤਿੰਨ ਨਾਟਕਾਂ ਨੂੰ ਪਛਾਣੋ?

- A. ਹੋਮਕਮਿੰਗ
- B. ਦ ਕੇਅਰਟੇਕਰ
- C. ਦ ਚਿਅਰਸ
- D. ਏਂਡਗੇਮ
- E. ਦ ਬਰਥਡੇ ਪਾਰਟੀ

ਹੇਠਾਂ ਦਿੱਤੇ ਵਿਕਲਪਾਂ ਵਿੱਚੋਂ ਸਹੀ ਉੱਤਰ ਚੁਣੋ:

1. ਸਿਰਫ਼ A, B ਅਤੇ E
2. ਸਿਰਫ਼ B, C ਅਤੇ A
3. ਸਿਰਫ਼ C, D ਅਤੇ B
4. ਸਿਰਫ਼ D, E ਅਤੇ A

**Options :**

- 485584134913. 1
- 485584134914. 2
- 485584134915. 3
- 485584134916. 4

**Question Number : 365 Question Id : 48558433730 Question Type : MCQ Option Shuffling : No Is Question Mandatory : No Calculator : None Response Time : N.A Think Time : N.A Minimum Instruction Time : 0**

**Correct Marks : 5 Wrong Marks : 1**

**Question Key Details :**

Key	Value
Comprehension	MCQ4

Lee Strasberg was associated with which three of the following?

- A. Berliner Ensemble
- B. Royal Shakespeare Company
- C. Theatre Guild
- D. Group Theatre
- E. Actors' Studio

Choose the correct answer from the options given below:

- 1. A, B and D only
- 2. C, D and E only
- 3. B, C and D only
- 4. A, C and E only

**Options :**

- 485584134917. 1
- 485584134918. 2
- 485584134919. 3
- 485584134920. 4

**Question Number : 365 Question Id : 48558433730 Question Type : MCQ Option Shuffling : No Is Question Mandatory : No Calculator : None Response Time : N.A Think Time : N.A Minimum Instruction Time : 0**

**Correct Marks : 5 Wrong Marks : 1**

**Question Key Details :**

Key	Value
Comprehension	MCQ4

ਹੇਠ ਲਿਖਿਆਂ ਵਿੱਚੋਂ " ਲੀ ਸਟਰਾਸਬਰਗ " ਕਿਹੜੇ ਤਿੰਨ ਨਾਲ ਸੰਬੰਧਿਤ ਹੈ?

- A. ਬੋਰਲਿਨਰ ਐਨਸੈਨਬਲ
- B. ਰਾਯਲ ਸ਼ੈਕਸਪੀਅਰ
- C. ਥੀਏਟਰ ਗਾਈਡ
- D. ਗਰੁੱਪ ਥੀਏਟਰ
- E. ਐਕਟਰ ਸਟੂਡੀਓ

ਹੇਠਾਂ ਦਿੱਤੇ ਵਿਕਲਪਾਂ ਵਿੱਚੋਂ ਸਹੀ ਉੱਤਰ ਚੁਣੋ:

1. ਸਿਰਫ਼ A, B ਅਤੇ D
2. ਸਿਰਫ਼ C, D ਅਤੇ E
3. ਸਿਰਫ਼ B, C ਅਤੇ D
4. ਸਿਰਫ਼ A, C ਅਤੇ E

**Options :**

- 485584134917. 1
- 485584134918. 2
- 485584134919. 3
- 485584134920. 4

**Question Number : 366 Question Id : 48558433731 Question Type : MCQ Option Shuffling : No Is Question Mandatory : No Calculator : None Response Time : N.A Think Time : N.A Minimum Instruction Time : 0 Correct Marks : 5 Wrong Marks : 1**

**Question Key Details :**

Key	Value
Comprehension	MCQ4

Match List I with List II

LIST I		LIST II	
A.	Kalidasa	I.	Svapna Vasavadattam
B.	Bhavabhuti	II.	Mricchakatikam
C.	Shudraka	III.	Abhijnan Shakuntalam
D.	Bhasa	IV.	Uttara Ramacharitam

Choose the correct answer from the options given below:

1. A-I, B-II, C-IV, D-III
2. A-II, B-III, C-I, D-IV
3. A-III, B-IV, C-II, D-I
4. A-IV, B-I, C-III, D-II

**Options :**

- 485584134921. 1
- 485584134922. 2
- 485584134923. 3
- 485584134924. 4

Question Number : 366 Question Id : 48558433731 Question Type : MCQ Option Shuffling : No Is Question Mandatory : No Calculator : None Response Time : N.A Think Time : N.A Minimum Instruction Time : 0

Correct Marks : 5 Wrong Marks : 1

Question Key Details :

Key	Value
Comprehension	MCQ4

ਸੂਚੀ I ਦਾ ਸੂਚੀ II ਨਾਲ ਮਿਲਾਣ ਕਰੋ:

ਸੂਚੀ I		ਸੂਚੀ II	
A.	ਕਾਲੀਦਾਸ	I.	ਸਪਨਾ ਵਸਾਵੇਦੱਤਮ
B.	ਭਵਾਭੂਤੀ	II.	ਮਰੀਚਕਤੀਕੱਮ
C.	ਸ਼ੁਦਰਕਾ	III.	ਅਭੀਜਨਨ ਸ਼ਕੁੰਤਲਮ
D.	ਭਾਸ਼ਾ	IV.	ਉਤੱਗ ਰਾਮਚਰਿਤੱਮ

ਹੇਠਾਂ ਦਿੱਤੇ ਵਿਕਲਪਾਂ ਵਿੱਚੋਂ ਸਹੀ ਉੱਤਰ ਚੁਣੋ:

1. A-I, B-II, C-IV, D-III

2. A-II, B-III, C-I, D-IV

3. A-III, B-IV, C-II, D-I

4. A-IV, B-I, C-III, D-II

Options :

485584134921. 1

485584134922. 2

485584134923. 3

485584134924. 4

Question Number : 367 Question Id : 48558433732 Question Type : MCQ Option Shuffling : No Is Question Mandatory : No Calculator : None Response Time : N.A Think Time : N.A Minimum Instruction Time : 0

Correct Marks : 5 Wrong Marks : 1

Question Key Details :

Key	Value
Comprehension	MCQ4

Match List I with List II

LIST I		LIST II	
A.	Vijaya Mehta	I.	Santu Rangili
B.	Satyadev Dubey	II.	Andha Yug
C.	E. Alkazi	III.	Are Mayavi Sarovar
D.	Pravin Joshi	IV.	Ek Shunya Bajirao

Choose the correct answer from the options given below:

1. A-II, B-I, C-IV, D-III
2. A-III, B-II, C-I, D-IV
3. A-IV, B-III, C-II, D-I
4. A-I, B-IV, C-III, D-II

**Options :**

485584134925. 1  
485584134926. 2  
485584134927. 3  
485584134928. 4

**Question Number : 367 Question Id : 48558433732 Question Type : MCQ Option Shuffling : No Is Question Mandatory : No Calculator : None Response Time : N.A Think Time : N.A Minimum Instruction Time : 0**

**Correct Marks : 5 Wrong Marks : 1**

**Question Key Details :**

Key	Value
Comprehension	MCQ4

ਸੂਚੀ I ਦਾ ਸੂਚੀ II ਨਾਲ ਮਿਲਾਣ ਕਰੋ:

ਸੂਚੀ I		ਸੂਚੀ II	
A.	ਵਿਜੈ ਮਹਿਤਾ	I.	ਸ਼ਾਂਤੂ ਰਾਣਾ ਜੀ
B.	ਸਤਜਦੇਵ ਦੂਬੇ	II.	ਅੰਧਾ ਯੁੱਗ
C.	ਈ. ਅਲਕਾਜ਼ੀ	III.	ਅਰੇ ਮਾਯਾਵੀ ਸਰੋਵਰ
D.	ਪਰਵੀਨ ਜੋਸ਼ੀ	IV.	ਏਕ ਸ਼ੁਨਯ ਬਾਜੀਰਾਊ

ਹੇਠਾਂ ਦਿੱਤੇ ਵਿਕਲਪਾਂ ਵਿੱਚੋਂ ਸਹੀ ਉੱਤਰ ਚੁਣੋ:

1. A-II, B-I, C-IV, D-III
2. A-III, B-II, C-I, D-IV
3. A-IV, B-III, C-II, D-I
4. A-I, B-IV, C-III, D-II

**Options :**

485584134925. 1  
485584134926. 2  
485584134927. 3  
485584134928. 4

**Question Number : 368 Question Id : 48558433733 Question Type : MCQ Option Shuffling : No Is Question Mandatory : No Calculator : None Response Time : N.A Think Time : N.A Minimum Instruction Time : 0**

**Correct Marks : 5 Wrong Marks : 1**

**Question Key Details :**

Key	Value
Comprehension	MCQ4

Match List I with List II

LIST I		LIST II	
Plays		Characters	
A.	Julius Caesar	I.	Horatio
B.	Othello	II.	King Duncan
C.	Macbeth	III.	Desdemona
D.	Hamlet	IV.	Marcus Brutus

Choose the correct answer from the options given below:

1. A-IV, B-III, C-II, D-I
2. A-I, B-II, C-III, D-IV
3. A-IV, B-I, C-III, D-II
4. A-II, B-III, C-I, D-IV

**Options :**

- 485584134929. 1
- 485584134930. 2
- 485584134931. 3
- 485584134932. 4

**Question Number : 368 Question Id : 48558433733 Question Type : MCQ Option Shuffling : No Is Question Mandatory : No Calculator : None Response Time : N.A Think Time : N.A Minimum Instruction Time : 0**

**Correct Marks : 5 Wrong Marks : 1**

**Question Key Details :**

Key	Value
Comprehension	MCQ4

ਸੂਚੀ I ਦਾ ਸੂਚੀ II ਨਾਲ ਮਿਲਾਣ ਕਰੋ:

ਸੂਚੀ I		ਸੂਚੀ II	
ਨਾਟਕ		ਚਰਿੱਤਰ	
A.	ਜੁਲੀਅਸ ਸੀਜ਼ਰ	I.	ਹੋਰੇਟਿਉ
B.	ਉਥੇਲੋ	II.	ਕਿੰਗ ਡਨਕਨ
C.	ਮੈਕਬੈਥ	III.	ਦੇਸਦੀਮੋਨਾ
D.	ਹੇਮਲੇਟ	IV.	ਮਾਰਕਸ ਬਰੂਟਸ

ਹੇਠਾਂ ਦਿੱਤੇ ਵਿਕਲਪਾਂ ਵਿੱਚੋਂ ਸਹੀ ਉੱਤਰ ਚੁਣੋ:

1. A-IV, B-III, C-II, D-I
2. A-I, B-II, C-III, D-IV
3. A-IV, B-I, C-III, D-II
4. A-II, B-III, C-I, D-IV

**Options :**

485584134929. 1  
485584134930. 2  
485584134931. 3  
485584134932. 4

**Question Number : 369 Question Id : 48558433734 Question Type : MCQ Option Shuffling : No Is Question Mandatory : No Calculator : None Response Time : N.A Think Time : N.A Minimum Instruction Time : 0**

**Correct Marks : 5 Wrong Marks : 1**

**Question Key Details :**

Key	Value
Comprehension	MCQ4

Match List I with List II

LIST I		LIST II	
A.	Ibsen Henrik	I.	The Father
B.	Chekhov Anton	II.	Ghosts
C.	Strindberg August	III.	Death of a Salesman
D.	Arthur Miller	IV.	The Cherry Orchard

Choose the correct answer from the options given below:

1. A-I, B-III, C-IV, D-II
2. A-II, B-IV, C-I, D-III
3. A-III, B-I, C-II, D-IV
4. A-IV, B-II, C-III, D-I

**Options :**

485584134933. 1  
485584134934. 2  
485584134935. 3  
485584134936. 4

Question Number : 369 Question Id : 48558433734 Question Type : MCQ Option Shuffling : No Is Question Mandatory : No Calculator : None Response Time : N.A Think Time : N.A Minimum Instruction Time : 0  
 Correct Marks : 5 Wrong Marks : 1  
 Question Key Details :

Key	Value
Comprehension	MCQ4

ਸੂਚੀ I ਦਾ ਸੂਚੀ II ਨਾਲ ਮਿਲਾਣ ਕਰੋ:

ਸੂਚੀ I		ਸੂਚੀ II	
A.	ਇਬਸੇਨ ਹੇਨਰਿਕ	I.	ਦ ਪਾਪਾ
B.	ਚੈਪੇਵ ਐਂਟਨ	II.	ਘੋਸ਼ਟ
C.	ਸਟਰਿਨਡਬਰਗ ਅਗਸਤ	III.	ਸੈਲਸਸੈਨ ਦੀ ਮੌਤ
D.	ਆਰਥਰ ਮਿਲਰ	IV.	ਦ ਚੈਰੀ ਓਰਕਾਰਡ

ਹੇਠਾਂ ਦਿੱਤੇ ਵਿਕਲਪਾਂ ਵਿੱਚੋਂ ਸਹੀ ਉੱਤਰ ਚੁਣੋ:

1. A-I, B-III, C-IV, D-II
2. A-II, B-IV, C-I, D-III
3. A-III, B-I, C-II, D-IV
4. A-IV, B-II, C-III, D-I

Options :

485584134933. 1  
 485584134934. 2  
 485584134935. 3  
 485584134936. 4

Question Number : 370 Question Id : 48558433735 Question Type : MCQ Option Shuffling : No Is Question Mandatory : No Calculator : None Response Time : N.A Think Time : N.A Minimum Instruction Time : 0  
 Correct Marks : 5 Wrong Marks : 1  
 Question Key Details :

Key	Value
Comprehension	MCQ4



Give the correct sequence of the following Traditional Theatre Forms according to their Geographical origin from South to North.

- A. Tamasha
- B. Yakshagana
- C. Bhand Jashna
- D. Kutiyattam
- E. Svanga

Choose the correct answer from the options given below:

- 1. D, B, A, E, C
- 2. E, C, B, A, D
- 3. A, D, C, B, E
- 4. B, E, D, C, A

**Options :**

- 485584134937. 1
- 485584134938. 2
- 485584134939. 3
- 485584134940. 4

**Question Number : 370 Question Id : 48558433735 Question Type : MCQ Option Shuffling : No Is Question Mandatory : No Calculator : None Response Time : N.A Think Time : N.A Minimum Instruction Time : 0**

**Correct Marks : 5 Wrong Marks : 1**

**Question Key Details :**

Key	Value
Comprehension	MCQ4

ਦੱਖਣ ਤੋਂ ਉੱਤਰ ਤੱਕ ਉਨ੍ਹਾਂ ਦੇ ਭੂਗੋਲਿਕ ਮੂਲ ਦੇ ਅਨੁਸਾਰ ਪਰੰਪਰਾਗਤ ਥੀਏਟਰ ਰੂਪਾਂ ਦਾ ਸਹੀ ਕ੍ਰਮ ਲਿਖੋ?

- A. ਤਮਾਸ਼ਾ
- B. ਯਕਸ਼ਗਾਨਾ
- C. ਭੰਡ ਜਸ਼ਨ
- D. ਕੁੱਤੀਅਤੱਮ
- E. ਸਵਾਂਗ

ਹੇਠਾਂ ਦਿੱਤੇ ਵਿਕਲਪਾਂ ਵਿੱਚੋਂ ਸਹੀ ਉੱਤਰ ਚੁਣੋ:

- 1. D, B, A, E, C
- 2. E, C, B, A, D
- 3. A, D, C, B, E
- 4. B, E, D, C, A

**Options :**

- 485584134937. 1
- 485584134938. 2
- 485584134939. 3
- 485584134940. 4

## Political Science

Group Number :	11
Group Id :	485584749
Group Maximum Duration :	45
Group Minimum Duration :	45
Show Attended Group? :	No
Edit Attended Group? :	No
Break time :	0
Group Marks :	200
Is this Group for Examiner? :	No
Examiner permission :	Cant View
Show Progress Bar? :	No

## Political Science

Section Id :	485584867
Section Number :	1
Section type :	Online
Mandatory or Optional :	Mandatory
Number of Questions :	50
Number of Questions to be attempted :	40
Section Marks :	200
Enable Mark as Answered Mark for Review and Clear Response :	Yes
Maximum Instruction Time :	0
Sub-Section Number :	1
Sub-Section Id :	4855842442
Question Shuffling Allowed :	Yes
Is Section Default? :	null

Question Number : 371 Question Id : 48558433736 Question Type : MCQ Option Shuffling : No Is Question Mandatory : No Calculator : None Response Time : N.A Think Time : N.A Minimum Instruction Time : 0 Correct Marks : 5 Wrong Marks : 1

Question Key Details :

Key	Value
Comprehension	MCQ

Prime minister of India addressed a special speech on 14<sup>th</sup> and 15<sup>th</sup> August midnight.

It was called:

1. Trust in the Nation
2. Tryst with India
3. Tryst with destiny
4. Independent India

Options :

485584134941. 1  
485584134942. 2

485584134943. 3  
485584134944. 4

**Question Number : 372 Question Id : 48558433737 Question Type : MCQ Option Shuffling : No Is Question Mandatory : No Calculator : None Response Time : N.A Think Time : N.A Minimum Instruction Time : 0**

**Correct Marks : 5 Wrong Marks : 1**

**Question Key Details :**

Key	Value
Comprehension	MCQ

State requisition Act was passed in which year?

1. 1952
2. 1954
3. 1956
4. 1958

**Options :**

485584134945. 1  
485584134946. 2  
485584134947. 3  
485584134948. 4

**Question Number : 373 Question Id : 48558433738 Question Type : MCQ Option Shuffling : No Is Question Mandatory : No Calculator : None Response Time : N.A Think Time : N.A Minimum Instruction Time : 0**

**Correct Marks : 5 Wrong Marks : 1**

**Question Key Details :**

Key	Value
Comprehension	MCQ

Given below are two statements: one is labelled as Assertion A and other is labelled as Reason R

**Assertion A:** Towards the end of 1990's the election commission started using the EVM.

**Reason R:** By 2004 the entire country had shifted to the EVM. But it was decided to place inside each polling booth a box for each candidate.

In the light of the above statements, choose the correct answer from the options given below

1. Both A and R are true and R is the correct explanation of A
2. Both A and R are true but R is the NOT correct explanation of A
3. A is true but R is not false
4. A is false but R is true

**Options :**

485584134949. 1  
485584134950. 2  
485584134951. 3  
485584134952. 4

**Question Number : 374 Question Id : 48558433739 Question Type : MCQ Option Shuffling : No Is Question Mandatory : No Calculator : None Response Time : N.A Think Time : N.A Minimum Instruction Time : 0**

**Correct Marks : 5 Wrong Marks : 1**

**Question Key Details :**

Key	Value
Comprehension	MCQ

Match List I with List II

LIST I		LIST II	
A.	Adopted Buddhism in 1956 and the leader of anti-caste movement	I.	PRI
B.	Founded in 1929, as National revolutionary party	II.	Acharya Narendra Dev
C.	Freedom fighter and a scholar of Buddhism	III.	Bhartiya Jan Sangh
D.	In 1951 party was formed with Shyam Prasad Mukherjee	IV.	Babasaheb Bhimrao Ambedkar

Choose the correct answer from the options given below:

1. A-I, B-II, C-III, D-IV
2. A-IV, B-I, C-II, D-III
3. A-III, B-II, C-IV, D-I
4. A-IV, B-III, C-II, D-I

**Options :**

- 485584134953. 1
- 485584134954. 2
- 485584134955. 3
- 485584134956. 4

**Question Number : 375 Question Id : 48558433740 Question Type : MCQ Option Shuffling : No Is Question Mandatory : No Calculator : None Response Time : N.A Think Time : N.A Minimum Instruction Time : 0**

**Correct Marks : 5 Wrong Marks : 1**

**Question Key Details :**

Key	Value
Comprehension	MCQ

Who was the director of Marathi Film Simhasan?

1. Jabbar Patel
2. Vijay Tendulkar
3. Datta Bhat
4. Mohan Agashe

**Options :**

- 485584134957. 1
- 485584134958. 2
- 485584134959. 3
- 485584134960. 4

**Question Number : 376 Question Id : 48558433741 Question Type : MCQ Option Shuffling : No Is Question Mandatory : No Calculator : None Response Time : N.A Think Time : N.A Minimum Instruction Time : 0 Correct Marks : 5 Wrong Marks : 1**

**Question Key Details :**

Key	Value
Comprehension	MCQ

A section of the big industrialist got together in 1944 and drafted a joint proposal for setting up a planned economy in the country. It was called \_\_\_\_\_

1. Industries Plan
2. New strategy of business
3. Bombay Plan
4. Revised Plan

**Options :**

- 485584134961. 1
- 485584134962. 2
- 485584134963. 3
- 485584134964. 4

**Question Number : 377 Question Id : 48558433742 Question Type : MCQ Option Shuffling : No Is Question Mandatory : No Calculator : None Response Time : N.A Think Time : N.A Minimum Instruction Time : 0 Correct Marks : 5 Wrong Marks : 1**

**Question Key Details :**

Key	Value
Comprehension	MCQ

NITI Ayog came into existence on which date?

1. 7 January 2015
2. 1 January 2015
3. 10 January 2015
4. 12 January 2015

**Options :**

- 485584134965. 1
- 485584134966. 2
- 485584134967. 3
- 485584134968. 4

**Question Number : 378 Question Id : 48558433743 Question Type : MCQ Option Shuffling : No Is Question Mandatory : No Calculator : None Response Time : N.A Think Time : N.A Minimum Instruction Time : 0 Correct Marks : 5 Wrong Marks : 1**

**Question Key Details :**

Key	Value
Comprehension	MCQ

Given below are two statements:

**Statements I:** The second five year plan stressed on heavy Industries.

**Statements II:** It declared that socialist pattern of society was its goal.

In the light of the above statements, choose the most appropriate answer from the options given below:

1. Both statement I and statement II are correct
2. Both statement I and statement II are incorrect
3. Statement I is correct but statement II is incorrect
4. Statement I is incorrect but statement II is correct

**Options :**

- 485584134969. 1
- 485584134970. 2
- 485584134971. 3
- 485584134972. 4

**Question Number : 379 Question Id : 48558433744 Question Type : MCQ Option Shuffling : No Is Question Mandatory : No Calculator : None Response Time : N.A Think Time : N.A Minimum Instruction Time : 0**

**Correct Marks : 5 Wrong Marks : 1**

**Question Key Details :**

Key	Value
Comprehension	MCQ

Choose the name of the author of 'Economy of Permanence'

1. K. N. Raj
2. P. C. Mahalannobis
3. J. C. Kumarappa
4. Karuna Banergee

**Options :**

- 485584134973. 1
- 485584134974. 2
- 485584134975. 3
- 485584134976. 4

**Question Number : 380 Question Id : 48558433745 Question Type : MCQ Option Shuffling : No Is Question Mandatory : No Calculator : None Response Time : N.A Think Time : N.A Minimum Instruction Time : 0**

**Correct Marks : 5 Wrong Marks : 1**

**Question Key Details :**

Key	Value
Comprehension	MCQ

In which year Britain attacked Egypt over the Sues Canal issue

1. 1955
2. 1956
3. 1957
4. 1958

**Options :**

485584134977. 1  
485584134978. 2  
485584134979. 3  
485584134980. 4

**Question Number : 381 Question Id : 48558433746 Question Type : MCQ Option Shuffling : No Is Question Mandatory : No Calculator : None Response Time : N.A Think Time : N.A Minimum Instruction Time : 0**

**Correct Marks : 5 Wrong Marks : 1**

**Question Key Details :**

Key	Value
Comprehension	MCQ

In which Article of Indian constitution lays down some Directive Principles of state Policy on Promotion of International peace and security

1. Article 51
2. Article 50
3. Article 49
4. Article 48

**Options :**

485584134981. 1  
485584134982. 2  
485584134983. 3  
485584134984. 4

**Question Number : 382 Question Id : 48558433747 Question Type : MCQ Option Shuffling : No Is Question Mandatory : No Calculator : None Response Time : N.A Think Time : N.A Minimum Instruction Time : 0**

**Correct Marks : 5 Wrong Marks : 1**

**Question Key Details :**

Key	Value
Comprehension	MCQ

The first summit of NAM was held in Belgrade in \_\_\_\_\_

1. January 1961
2. March 1961
3. May 1961
4. September 1961

**Options :**

- 485584134985. 1
- 485584134986. 2
- 485584134987. 3
- 485584134988. 4

**Question Number : 383 Question Id : 48558433748 Question Type : MCQ Option Shuffling : No Is Question Mandatory : No Calculator : None Response Time : N.A Think Time : N.A Minimum Instruction Time : 0**

**Correct Marks : 5 Wrong Marks : 1**

**Question Key Details :**

Key	Value
Comprehension	MCQ

Frankly-----my impression (of Zhou Enlai) was very favourable \_\_\_\_\_ the Chinese premier is, I believe a good type of man and trust worthy

Who wrote there words in letter in December 1956

1. C Rajgopalachari
2. Mahatma Gandhi
3. Sardar Patel
4. Jawahar Lal Nehru

**Options :**

- 485584134989. 1
- 485584134990. 2
- 485584134991. 3
- 485584134992. 4

**Question Number : 384 Question Id : 48558433749 Question Type : MCQ Option Shuffling : No Is Question Mandatory : No Calculator : None Response Time : N.A Think Time : N.A Minimum Instruction Time : 0**

**Correct Marks : 5 Wrong Marks : 1**

**Question Key Details :**

Key	Value
Comprehension	MCQ



The first nuclear explosion undertaken by India in which year

1. 1973
2. 1974
3. 1975
4. 1976

**Options :**

485584134993. 1  
485584134994. 2  
485584134995. 3  
485584134996. 4

**Question Number : 385 Question Id : 48558433750 Question Type : MCQ Option Shuffling : No Is Question Mandatory : No Calculator : None Response Time : N.A Think Time : N.A Minimum Instruction Time : 0**

**Correct Marks : 5 Wrong Marks : 1**

**Question Key Details :**

Key	Value
Comprehension	MCQ

Match List I with List II

LIST I		LIST II	
A.	The goal of India's Foreign Policy in the period 1950-1964	I.	Tibetan spiritual leader who crossed over to India
B.	Panchsheel	II.	Preservation of territorial integrity sovereignty and economic development
C.	Bandung Conference	III.	Five principles of peaceful co-existence
D.	Dalai Lama	IV.	Led to the establishment of NAM

Choose the correct answer from the options given below:

1. A-I, B-II, C-III, D-IV
2. A-II, B-III, C-IV, D-I
3. A-II, B-IV, C-III, D-I
4. A-I, B-III, C-II, D-IV

**Options :**

485584134997. 1  
485584134998. 2  
485584134999. 3  
485584135000. 4

**Question Number : 386 Question Id : 48558433751 Question Type : MCQ Option Shuffling : No Is Question Mandatory : No Calculator : None Response Time : N.A Think Time : N.A Minimum Instruction Time : 0**

**Correct Marks : 5 Wrong Marks : 1**

**Question Key Details :**

Key	Value
Comprehension	MCQ

Who coined the famous slogan Jai Jawan Jai Kisan

1. Jawaharlal Nehru
2. Lal Bhadur Shastri
3. Lal Bahadur Lal
4. Mahatma Gandhi

**Options :**

- 485584135001. 1
- 485584135002. 2
- 485584135003. 3
- 485584135004. 4

**Question Number : 387 Question Id : 48558433752 Question Type : MCQ Option Shuffling : No Is Question Mandatory : No Calculator : None Response Time : N.A Think Time : N.A Minimum Instruction Time : 0**

**Correct Marks : 5 Wrong Marks : 1**

**Question Key Details :**

Key	Value
Comprehension	MCQ

Who introduced mid-day meal scheme for School Children.

1. K. Kamraj
2. K.N. Raj
3. Vinoba Bhave
4. K. Nizilingappa

**Options :**

- 485584135005. 1
- 485584135006. 2
- 485584135007. 3
- 485584135008. 4

**Question Number : 388 Question Id : 48558433753 Question Type : MCQ Option Shuffling : No Is Question Mandatory : No Calculator : None Response Time : N.A Think Time : N.A Minimum Instruction Time : 0**

**Correct Marks : 5 Wrong Marks : 1**

**Question Key Details :**

Key	Value
Comprehension	MCQ

Choose the name of the President of India from 1969 to 1974

1. Neelam Sanjeeva Reddy
2. V. V. Giri
3. Zakir Hussain
4. Fakruddin Ali Ahmed

**Options :**

485584135009. 1  
485584135010. 2  
485584135011. 3  
485584135012. 4

**Question Number : 389 Question Id : 48558433754 Question Type : MCQ Option Shuffling : No Is Question Mandatory : No Calculator : None Response Time : N.A Think Time : N.A Minimum Instruction Time : 0**

**Correct Marks : 5 Wrong Marks : 1**

**Question Key Details :**

Key	Value
Comprehension	MCQ

Who formed DMK as a Political Party in 1949

1. Ram Manohar Lohia
2. C. Natrajan Ananaduri
3. Nevile Maxwell
4. Karpoori Thakur

**Options :**

485584135013. 1  
485584135014. 2  
485584135015. 3  
485584135016. 4

**Question Number : 390 Question Id : 48558433755 Question Type : MCQ Option Shuffling : No Is Question Mandatory : No Calculator : None Response Time : N.A Think Time : N.A Minimum Instruction Time : 0**

**Correct Marks : 5 Wrong Marks : 1**

**Question Key Details :**

Key	Value
Comprehension	MCQ

'Sampoorna Kranti ab nara hai, bhavi itihias hamara hai'

Above slogan is associated with which movement

1. Anti-Arrack-Movement
2. Bihar Movement
3. Gujrat Movement
4. Chipko Movement

**Options :**

485584135017. 1  
485584135018. 2  
485584135019. 3  
485584135020. 4

**Question Number : 391 Question Id : 48558433756 Question Type : MCQ Option Shuffling : No Is Question Mandatory : No Calculator : None Response Time : N.A Think Time : N.A Minimum Instruction Time : 0**

**Correct Marks : 5 Wrong Marks : 1**

**Question Key Details :**

Key	Value
Comprehension	MCQ

In May 1977, The Janta Party government appointed which commission, to inquire into several aspects of allegation of abuse of authority.

1. Sheng Commission
2. Shai Commission
3. Shah Commission
4. J.P Commission

**Options :**

485584135021. 1  
485584135022. 2  
485584135023. 3  
485584135024. 4

**Question Number : 392 Question Id : 48558433757 Question Type : MCQ Option Shuffling : No Is Question Mandatory : No Calculator : None Response Time : N.A Think Time : N.A Minimum Instruction Time : 0**

**Correct Marks : 5 Wrong Marks : 1**

**Question Key Details :**

Key	Value
Comprehension	MCQ

Who were the Deputy Prime Minister of India from 1967 to 1969

1. Devi Lal
2. Charan Singh
3. Jagjivan Ram
4. Morarji Dessai

**Options :**

485584135025. 1  
485584135026. 2  
485584135027. 3  
485584135028. 4

**Question Number : 393 Question Id : 48558433758 Question Type : MCQ Option Shuffling : No Is Question Mandatory : No Calculator : None Response Time : N.A Think Time : N.A Minimum Instruction Time : 0**

**Correct Marks : 5 Wrong Marks : 1**

**Question Key Details :**

Key	Value
Comprehension	MCQ

Dalit Panthers, a militant organisation of Dalit Youth, was formed in which state in 1972

1. Kerala
2. Maharashtra
3. Bihar
4. West Bengal

**Options :**

485584135029. 1  
485584135030. 2  
485584135031. 3  
485584135032. 4

**Question Number : 394 Question Id : 48558433759 Question Type : MCQ Option Shuffling : No Is Question Mandatory : No Calculator : None Response Time : N.A Think Time : N.A Minimum Instruction Time : 0**

**Correct Marks : 5 Wrong Marks : 1**

**Question Key Details :**

Key	Value
Comprehension	MCQ

"Our blood was spilled for this glorious city and what we got was the right to eat stories. Now, now we must explode the building that kisses the sky." Who is the author of above poem.

1. Jayant Karve
2. Eleavor Zelliot
3. Namdeo Dahasal
4. Raj Kumari Amrit Kaur

**Options :**

485584135033. 1  
485584135034. 2  
485584135035. 3  
485584135036. 4

**Question Number : 395 Question Id : 48558433760 Question Type : MCQ Option Shuffling : No Is Question Mandatory : No Calculator : None Response Time : N.A Think Time : N.A Minimum Instruction Time : 0**

**Correct Marks : 5 Wrong Marks : 1**

**Question Key Details :**

Key	Value
Comprehension	MCQ

In which year RTI bill was tabled and received presidential assent.

1. June 2005
2. July 2006
3. June 2007
4. July 2008

**Options :**

485584135037. 1  
485584135038. 2  
485584135039. 3  
485584135040. 4

**Question Number : 396 Question Id : 48558433761 Question Type : MCQ Option Shuffling : No Is Question Mandatory : No Calculator : None Response Time : N.A Think Time : N.A Minimum Instruction Time : 0**

**Correct Marks : 5 Wrong Marks : 1**

**Question Key Details :**

Key	Value
Comprehension	MCQ

Given below are two statements: one is labelled as **Assertion A** and the other is labelled as **Reason R**

**Assertion A** : Asom Gana Sangram Parishad organised themselves as a regional political party called Asom Gana Parishad

**Reason R** : It came to power in 1985 with the promise of resolving the foreign national problem as well as to build a 'Golden Assam'

In the light of the above statements, choose the **correct** answer from the options given below:

1. Both **A** and **R** are true and **R** is the correct explanation of **A**
2. Both **A** and **R** are true and **R** is **NOT** the correct explanation of **A**
3. **A** is true but **R** is false
4. **A** is false but **R** is true

**Options :**

485584135041. 1

485584135042. 2

485584135043. 3

485584135044. 4

**Question Number : 397 Question Id : 48558433762 Question Type : MCQ Option Shuffling : No Is Question Mandatory : No Calculator : None Response Time : N.A Think Time : N.A Minimum Instruction Time : 0**

**Correct Marks : 5 Wrong Marks : 1**

**Question Key Details :**

Key	Value
Comprehension	MCQ

The bomb dropped by the US on Hiroshima city was code named

1. Fat Man
2. Little Boy
3. Fat Woman
4. Little Girl

**Options :**

485584135045. 1

485584135046. 2

485584135047. 3

485584135048. 4

**Question Number : 398 Question Id : 48558433763 Question Type : MCQ Option Shuffling : No Is Question Mandatory : No Calculator : None Response Time : N.A Think Time : N.A Minimum Instruction Time : 0**

**Correct Marks : 5 Wrong Marks : 1**

**Question Key Details :**

Key	Value
Comprehension	MCQ

Name the leader who was the first Prime Minister of Ghana and founder figure of NAM.

1. Josip Broz
2. Kwame Nkrumah
3. Kwame Skrumah
4. Gamal Abdel

**Options :**

- 485584135049. 1
- 485584135050. 2
- 485584135051. 3
- 485584135052. 4

**Question Number : 399 Question Id : 48558433764 Question Type : MCQ Option Shuffling : No Is Question Mandatory : No Calculator : None Response Time : N.A Think Time : N.A Minimum Instruction Time : 0**

**Correct Marks : 5 Wrong Marks : 1**

**Question Key Details :**

Key	Value
Comprehension	MCQ

Name the founder of Bolshevik Communist Party.

1. Joseph Stalin
2. Vladimir Lenin
3. Boris Yeltsin
4. Leonid Brezhnev

**Options :**

- 485584135053. 1
- 485584135054. 2
- 485584135055. 3
- 485584135056. 4

**Question Number : 400 Question Id : 48558433765 Question Type : MCQ Option Shuffling : No Is Question Mandatory : No Calculator : None Response Time : N.A Think Time : N.A Minimum Instruction Time : 0**

**Correct Marks : 5 Wrong Marks : 1**

**Question Key Details :**

Key	Value
Comprehension	MCQ



Who was the first elected President of Russia?

1. Mikhail Gorbachev
2. Fidel Kastro
3. Boris Yeltsin
4. Joseph Stalin

**Options :**

485584135057. 1  
485584135058. 2  
485584135059. 3  
485584135060. 4

**Question Number : 401 Question Id : 48558433766 Question Type : MCQ Option Shuffling : No Is Question Mandatory : No Calculator : None Response Time : N.A Think Time : N.A Minimum Instruction Time : 0**

**Correct Marks : 5 Wrong Marks : 1**

**Question Key Details :**

Key	Value
Comprehension	MCQ

- A. On 19 March 2003, the US launched its invasion of Iraq.
- B. US has lost over 3000 military personnel in the war
- C. The ostensible purpose of the invasion was to destroy Iraq from developing weapons at mass destruction
- D. More than forty other countries joined in the US led coalition of the willing after the UN refused to give its mandate to the invasion

Choose the most appropriate answer from the options given below:

1. A, C, D only
2. A, B, C only
3. A, B, D only
4. C, D, A only

**Options :**

485584135061. 1  
485584135062. 2  
485584135063. 3  
485584135064. 4

**Question Number : 402 Question Id : 48558433767 Question Type : MCQ Option Shuffling : No Is Question Mandatory : No Calculator : None Response Time : N.A Think Time : N.A Minimum Instruction Time : 0**

**Correct Marks : 5 Wrong Marks : 1**

**Question Key Details :**

Key	Value
Comprehension	MCQ

In which year the Lisbon Treaty came in to force?

1. 2007
2. 2008
3. 2009
4. 2010

**Options :**

- 485584135065. 1
- 485584135066. 2
- 485584135067. 3
- 485584135068. 4

**Question Number : 403 Question Id : 48558433768 Question Type : MCQ Option Shuffling : No Is Question Mandatory : No Calculator : None Response Time : N.A Think Time : N.A Minimum Instruction Time : 0**

**Correct Marks : 5 Wrong Marks : 1**

**Question Key Details :**

Key	Value
Comprehension	MCQ

Bangladesh was a part of Pakistan from\_\_\_\_\_

1. 1947 to 1971
2. 1947 to 1969
3. 1948 to 1949
4. 1948 to 1969

**Options :**

- 485584135069. 1
- 485584135070. 2
- 485584135071. 3
- 485584135072. 4

**Question Number : 404 Question Id : 48558433769 Question Type : MCQ Option Shuffling : No Is Question Mandatory : No Calculator : None Response Time : N.A Think Time : N.A Minimum Instruction Time : 0**

**Correct Marks : 5 Wrong Marks : 1**

**Question Key Details :**

Key	Value
Comprehension	MCQ

In 2008, in which state the monarchy was abolished and emerged as a democratic republic?

1. Bhutan
2. Nepal
3. Bangladesh
4. Maldives

**Options :**

485584135073. 1  
485584135074. 2  
485584135075. 3  
485584135076. 4

**Question Number : 405 Question Id : 48558433770 Question Type : MCQ Option Shuffling : No Is Question Mandatory : No Calculator : None Response Time : N.A Think Time : N.A Minimum Instruction Time : 0**

**Correct Marks : 5 Wrong Marks : 1**

**Question Key Details :**

Key	Value
Comprehension	MCQ

Name the 9th Secretary-General of UN.

1. Antonio Guterres
2. Ban Ki Moon
3. Kofi A. Annan
4. U. Thart

**Options :**

485584135077. 1  
485584135078. 2  
485584135079. 3  
485584135080. 4

**Question Number : 406 Question Id : 48558433771 Question Type : MCQ Option Shuffling : No Is Question Mandatory : No Calculator : None Response Time : N.A Think Time : N.A Minimum Instruction Time : 0**

**Correct Marks : 5 Wrong Marks : 1**

**Question Key Details :**

Key	Value
Comprehension	MCQ

The world trade organisation sets the rules for....

1. Global Economy
2. Global Trade
3. Global Future
4. Global Issues

**Options :**

- 485584135081. 1
- 485584135082. 2
- 485584135083. 3
- 485584135084. 4

**Question Number : 407 Question Id : 48558433772 Question Type : MCQ Option Shuffling : No Is Question Mandatory : No Calculator : None Response Time : N.A Think Time : N.A Minimum Instruction Time : 0**

**Correct Marks : 5 Wrong Marks : 1**

**Question Key Details :**

Key	Value
Comprehension	MCQ

The Nuclear Non Proliferation Treaty of 1968 was an \_\_\_\_\_

1. Arms control treaty
2. Arms reduction treaty
3. Arms availability treaty
4. Arms for developed country

**Options :**

- 485584135085. 1
- 485584135086. 2
- 485584135087. 3
- 485584135088. 4

**Question Number : 408 Question Id : 48558433773 Question Type : MCQ Option Shuffling : No Is Question Mandatory : No Calculator : None Response Time : N.A Think Time : N.A Minimum Instruction Time : 0**

**Correct Marks : 5 Wrong Marks : 1**

**Question Key Details :**

Key	Value
Comprehension	MCQ

When was Earth Summit held in Rio-de-Janeiro?

1. June 1991
2. June 1992
3. June 1993
4. June 1994

**Options :**

- 485584135089. 1
- 485584135090. 2
- 485584135091. 3
- 485584135092. 4

**Question Number : 409 Question Id : 48558433774 Question Type : MCQ Option Shuffling : No Is Question Mandatory : No Calculator : None Response Time : N.A Think Time : N.A Minimum Instruction Time : 0**

**Correct Marks : 5 Wrong Marks : 1**

**Question Key Details :**

Key	Value
Comprehension	MCQ

India signed and ratified the 1997 Kyoto Protocol in

1. August 2001
2. August 1997
3. August 2003
4. August 2002

**Options :**

- 485584135093. 1
- 485584135094. 2
- 485584135095. 3
- 485584135096. 4

**Question Number : 410 Question Id : 48558433775 Question Type : MCQ Option Shuffling : No Is Question Mandatory : No Calculator : None Response Time : N.A Think Time : N.A Minimum Instruction Time : 0**

**Correct Marks : 5 Wrong Marks : 1**

**Question Key Details :**

Key	Value
Comprehension	MCQ

The energy Conservation Act was passed in India in which year?

1. 2000
2. 2001
3. 2002
4. 2003

**Options :**

485584135097. 1  
485584135098. 2  
485584135099. 3  
485584135100. 4

**Sub-Section Number :** 2  
**Sub-Section Id :** 4855842443  
**Question Shuffling Allowed :** No  
**Is Section Default? :** null

**Question Number : 411 Question Id : 48558433776 Question Type : MCQ Option Shuffling : No Is Question Mandatory : No Calculator : None Response Time : N.A Think Time : N.A Minimum Instruction Time : 0**

**Correct Marks : 5 Wrong Marks : 1**

**Question Key Details :**

Key	Value
Comprehension	Comp1

Read the paragraph given below and answer the following questions.

Shastri was the country's Prime Minister from 1964-1966. During Shastri's brief Prime Ministership, the country faced two major challenges. While India was still recovering from the economic implications of the war with China, failed monsoons, drought and serious food crisis presented a grave challenge. The country also faced a war with Pakistan in 1965. Shastri's famous slogan 'Jai Jawan Jai Kisan', symbolised the country's resolve to face both these challenges.

Shastri's Prime Ministership came to an abrupt end on 10 January 1966, when he suddenly expired in Tashkent, then in USSR and currently the capital of Uzbekistan. He was there to discuss and sign an agreement with Muhammad Ayub Khan, the then President of Pakistan, to end the war.

Lal Bahadur Shastri's Prime Ministership came to an abrupt end on \_\_\_\_\_

1. 10 January 1966
2. 10 February 1966
3. 10 January 1964
4. 10 February 1964

**Options :**

485584135101. 1  
485584135102. 2  
485584135103. 3  
485584135104. 4

**Question Number : 412 Question Id : 48558433777 Question Type : MCQ Option Shuffling : No Is Question Mandatory : No Calculator : None Response Time : N.A Think Time : N.A Minimum Instruction Time : 0**

**Correct Marks : 5 Wrong Marks : 1**

**Question Key Details :**

Key	Value
Comprehension	Comp1

Read the paragraph given below and answer the following questions.

Shastri was the country's Prime Minister from 1964-1966. During Shastri's brief Prime Ministership, the country faced two major challenges. While India was still recovering from the economic implications of the war with China, failed monsoons, drought and serious food crisis presented a grave challenge. The country also faced a war with Pakistan in 1965. Shastri's famous slogan 'Jai Jawan Jai Kisan', symbolised the country's resolve to face both these challenges.

Shastri's Prime Ministership came to an abrupt end on 10 January 1966, when he suddenly expired in Tashkent, then in USSR and currently the capital of Uzbekistan. He was there to discuss and sign an agreement with Muhammad Ayub Khan, the then President of Pakistan, to end the war.

During the Prime Ministership of Lal Bahadur Shastri, India faces a war with

1. China
2. Pakistan
3. Bhutan
4. Sri Lanka

**Options :**

485584135105. 1

485584135106. 2

485584135107. 3

485584135108. 4

**Question Number : 413 Question Id : 48558433778 Question Type : MCQ Option Shuffling : No Is Question Mandatory : No Calculator : None Response Time : N.A Think Time : N.A Minimum Instruction Time : 0**

**Correct Marks : 5 Wrong Marks : 1**

**Question Key Details :**

Key	Value
Comprehension	Comp1

Read the paragraph given below and answer the following questions.

Shastri was the country's Prime Minister from 1964-1966. During Shastri's brief Prime Ministership, the country faced two major challenges. While India was still recovering from the economic implications of the war with China, failed monsoons, drought and serious food crisis presented a grave challenge. The country also faced a war with Pakistan in 1965. Shastri's famous slogan 'Jai Jawan Jai Kisan', symbolised the country's resolve to face both these challenges.

Shastri's Prime Ministership came to an abrupt end on 10 January 1966, when he suddenly expired in Tashkent, then in USSR and currently the capital of Uzbekistan. He was there to discuss and sign an agreement with Muhammad Ayub Khan, the then President of Pakistan, to end the war.

Lal Bahadur Shastri was India's Prime Minister from:

1. 1965 - 1966
2. 1962 - 1966
3. 1964 - 1966
4. 1962 - 1966

**Options :**

- 485584135109. 1
- 485584135110. 2
- 485584135111. 3
- 485584135112. 4

**Question Number : 414 Question Id : 48558433779 Question Type : MCQ Option Shuffling : No Is Question Mandatory : No Calculator : None Response Time : N.A Think Time : N.A Minimum Instruction Time : 0**

**Correct Marks : 5 Wrong Marks : 1**

**Question Key Details :**

Key	Value
Comprehension	Comp1

Read the paragraph given below and answer the following questions.

Shastri was the country's Prime Minister from 1964-1966. During Shastri's brief Prime Ministership, the country faced two major challenges. While India was still recovering from the economic implications of the war with China, failed monsoons, drought and serious food crisis presented a grave challenge. The country also faced a war with Pakistan in 1965. Shastri's famous slogan 'Jai Jawan Jai Kisan', symbolised the country's resolve to face both these challenges.

Shastri's Prime Ministership came to an abrupt end on 10 January 1966, when he suddenly expired in Tashkent, then in USSR and currently the capital of Uzbekistan. He was there to discuss and sign an agreement with Muhammad Ayub Khan, the then President of Pakistan, to end the war.



Tashkent is the capital of which country now?

1. USSR
2. Uzbekistan
3. China
4. Pakistan

**Options :**

485584135113. 1  
485584135114. 2  
485584135115. 3  
485584135116. 4

**Question Number : 415 Question Id : 48558433780 Question Type : MCQ Option Shuffling : No Is Question Mandatory : No Calculator : None Response Time : N.A Think Time : N.A Minimum Instruction Time : 0**

**Correct Marks : 5 Wrong Marks : 1**

**Question Key Details :**

Key	Value
Comprehension	Compl

Read the paragraph given below and answer the following questions.

Shastri was the country's Prime Minister from 1964-1966. During Shastri's brief Prime Ministership, the country faced two major challenges. While India was still recovering from the economic implications of the war with China, failed monsoons, drought and serious food crisis presented a grave challenge. The country also faced a war with Pakistan in 1965. Shastri's famous slogan 'Jai Jawan Jai Kisan', symbolised the country's resolve to face both these challenges.

Shastri's Prime Ministership came to an abrupt end on 10 January 1966, when he suddenly expired in Tashkent, then in USSR and currently the capital of Uzbekistan. He was there to discuss and sign an agreement with Muhammad Ayub Khan, the then President of Pakistan, to end the war.

Name the leader who had resigned from the position of Railway Minister accepting moral responsibility for a major railway accident.

1. K. Kamraj
2. Morarji Desai
3. Jawahar Lal Nehru
4. Lal Bahadur Shastri

**Options :**

485584135117. 1  
485584135118. 2  
485584135119. 3  
485584135120. 4

**Sub-Section Number :**

3

**Sub-Section Id :**

4855842444

**Question Shuffling Allowed :**

No

Is Section Default? :

null

Question Number : 416 Question Id : 48558433781 Question Type : MCQ Option Shuffling : No Is Question Mandatory : No Calculator : None Response Time : N.A Think Time : N.A Minimum Instruction Time : 0

Correct Marks : 5 Wrong Marks : 1

Question Key Details :

Key	Value
Comprehension	Comp2

The Indian Government is already participating in global efforts through a number of programmes. For example, India's National Auto-fuel Policy mandates cleaner fuels for vehicles. The energy Conservation Act, passed in 2001, outlines initiative to improve energy efficiency. Similarly, the Electricity Act of 2003 encourages the use of renewable energy. Recent trends in importing natural gas and encouraging the adoption of clean coal technologies show that India has been making real efforts. the Government is also keen to launch a National Mission on Biodiesel, using about 11 million hectares of land to produce biodiesel by 2011-2012. India ratified the Paris Climate Agreement on 2 October 2016. And India has one of the largest renewable energy programmes in the world.

A review of the implementation of the agreements at the Earth Summit in Rio was undertaken by India in 1997.

India feels this contravenes very spirit of UNFCCC. Neither does it seem fair to impose restrictions on India when the country's rise in per capita carbon emissions by 2030 is likely to still represent less than half the world average of 3.8 tonnes in 2000. Indian emissions are predicted to rise from 0.9 tonnes per capita in 2000 to 1.6 tonnes per capita in 2030

Reservation Act was passed in

1. 2000
2. 2001
3. 2002
4. 2003

Options :

- 485584135121. 1
- 485584135122. 2
- 485584135123. 3
- 485584135124. 4

Question Number : 417 Question Id : 48558433782 Question Type : MCQ Option Shuffling : No Is Question Mandatory : No Calculator : None Response Time : N.A Think Time : N.A Minimum Instruction Time : 0

Correct Marks : 5 Wrong Marks : 1

Question Key Details :

Key	Value
Comprehension	Comp2

The Indian Government is already participating in global efforts through a number of programmes. For example, India's National Auto-fuel Policy mandates cleaner fuels for vehicles. The energy Conservation Act, passed in 2001, outlines initiative to improve energy efficiency. Similarly, the Electricity Act of 2003 encourages the use of renewable energy. Recent trends in importing natural gas and encouraging the adoption of clean coal technologies show that India has been making real efforts. the Government is also keen to launch a National Mission on Biodiesel, using about 11 million hectares of land to produce biodiesel by 2011-2012. India ratified the Paris Climate Agreement on 2 October 2016. And India has one of the largest renewable energy programmes in the world.

A review of the implementation of the agreements at the Earth Summit in Rio was undertaken by India in 1997.

India feels this contravenes very spirit of UNFCCC. Neither does it seem fair to impose restrictions on India when the country's rise in per capita carbon emissions by 2030 is likely to still represent less than half the world average of 3.8 tonnes in 2000. Indian emissions are predicted to rise from 0.9 tonnes per capita in 2000 to 1.6 tonnes per capita in 2030

Electricity Act of 2003 encourages the uses of

1. Renewable energy
2. Non renewable energy
3. No use of col technology
4. Not importing the natural gas

**Options :**

- 485584135125. 1
- 485584135126. 2
- 485584135127. 3
- 485584135128. 4

**Question Number : 418 Question Id : 48558433783 Question Type : MCQ Option Shuffling : No Is Question Mandatory : No Calculator : None Response Time : N.A Think Time : N.A Minimum Instruction Time : 0**

**Correct Marks : 5 Wrong Marks : 1**

**Question Key Details :**

Key	Value
Comprehension	Comp2

The Indian Government is already participating in global efforts through a number of programmes. For example, India's National Auto-fuel Policy mandates cleaner fuels for vehicles. The energy Conservation Act, passed in 2001, outlines initiative to improve energy efficiency. Similarly, the Electricity Act of 2003 encourages the use of renewable energy. Recent trends in importing natural gas and encouraging the adoption of clean coal technologies show that India has been making real efforts. the Government is also keen to launch a National Mission on Biodiesel, using about 11 million hectares of land to produce biodiesel by 2011-2012. India ratified the Paris Climate Agreement on 2 October 2016. And India has one of the largest renewable energy programmes in the world.

A review of the implementation of the agreements at the Earth Summit in Rio was undertaken by India in 1997.

India feels this contravenes very spirit of UNFCCC. Neither does it seem fair to impose restrictions on India when the country's rise in per capita carbon emissions by 2030 is likely to still represent less than half the world average of 3.8 tonnes in 2000. Indian emissions are predicted to rise from 0.9 tonnes per capita in 2000 to 1.6 tonnes per capita in 2030

In which year India ratified the Paris Climate Agreement?

1. 2014
2. 2015
3. 2016
4. 2017

**Options :**

- 485584135129. 1
- 485584135130. 2
- 485584135131. 3
- 485584135132. 4

**Question Number : 419 Question Id : 48558433784 Question Type : MCQ Option Shuffling : No Is Question Mandatory : No Calculator : None Response Time : N.A Think Time : N.A Minimum Instruction Time : 0**

**Correct Marks : 5 Wrong Marks : 1**

**Question Key Details :**

Key	Value
Comprehension	Comp2

The Indian Government is already participating in global efforts through a number of programmes. For example, India's National Auto-fuel Policy mandates cleaner fuels for vehicles. The energy Conservation Act, passed in 2001, outlines initiative to improve energy efficiency. Similarly, the Electricity Act of 2003 encourages the use of renewable energy. Recent trends in importing natural gas and encouraging the adoption of clean coal technologies show that India has been making real efforts. the Government is also keen to launch a National Mission on Biodiesel, using about 11 million hectares of land to produce biodiesel by 2011-2012. India ratified the Paris Climate Agreement on 2 October 2016. And India has one of the largest renewable energy programmes in the world.

A review of the implementation of the agreements at the Earth Summit in Rio was undertaken by India in 1997.

India feels this contravenes very spirit of UNFCCC. Neither does it seem fair to impose restrictions on India when the country's rise in per capita carbon emissions by 2030 is likely to still represent less than half the world average of 3.8 tonnes in 2000. Indian emissions are predicted to rise from 0.9 tonnes per capita in 2000 to 1.6 tonnes per capita in 2030

India emission are predicted to rise 1.6 tonnes per capital in \_\_\_\_\_

1. 2025
2. 2030
3. 2035
4. 2040

**Options :**

- 485584135133. 1
- 485584135134. 2
- 485584135135. 3
- 485584135136. 4

**Question Number : 420 Question Id : 48558433785 Question Type : MCQ Option Shuffling : No Is Question Mandatory : No Calculator : None Response Time : N.A Think Time : N.A Minimum Instruction Time : 0**

**Correct Marks : 5 Wrong Marks : 1**

**Question Key Details :**

Key	Value
Comprehension	Comp2

The Indian Government is already participating in global efforts through a number of programmes. For example, India's National Auto-fuel Policy mandates cleaner fuels for vehicles. The energy Conservation Act, passed in 2001, outlines initiative to improve energy efficiency. Similarly, the Electricity Act of 2003 encourages the use of renewable energy. Recent trends in importing natural gas and encouraging the adoption of clean coal technologies show that India has been making real efforts. the Government is also keen to launch a National Mission on Biodiesel, using about 11 million hectares of land to produce biodiesel by 2011-2012. India ratified the Paris Climate Agreement on 2 October 2016. And India has one of the largest renewable energy programmes in the world.

A review of the implementation of the agreements at the Earth Summit in Rio was undertaken by India in 1997.

India feels this contravenes very spirit of UNFCCC. Neither does it seem fair to impose restrictions on India when the country's rise in per capita carbon emissions by 2030 is likely to still represent less than half the world average of 3.8 tonnes in 2000. Indian emissions are predicted to rise from 0.9 tonnes per capita in 2000 to 1.6 tonnes per capita in 2030

Write the full form of UNFCCC

1. United Nations Framework Convention on Climate Change
2. Union Nations Framework Connection on Climate Change
3. United National Framework Connection on Climate Change
4. United Nations Forum Convention on Climate Change

**Options :**

- 485584135137. 1
- 485584135138. 2
- 485584135139. 3
- 485584135140. 4

## Sociology

<b>Group Number :</b>	12
<b>Group Id :</b>	485584750
<b>Group Maximum Duration :</b>	45
<b>Group Minimum Duration :</b>	45
<b>Show Attended Group? :</b>	No
<b>Edit Attended Group? :</b>	No
<b>Break time :</b>	0
<b>Group Marks :</b>	200
<b>Is this Group for Examiner? :</b>	No
<b>Examiner permission :</b>	Cant View
<b>Show Progress Bar? :</b>	No

## Sociology

<b>Section Id :</b>	485584868
<b>Section Number :</b>	1
<b>Section type :</b>	Online

<b>Mandatory or Optional :</b>	Mandatory
<b>Number of Questions :</b>	50
<b>Number of Questions to be attempted :</b>	40
<b>Section Marks :</b>	200
<b>Enable Mark as Answered Mark for Review and Clear Response :</b>	Yes
<b>Maximum Instruction Time :</b>	0
<b>Sub-Section Number :</b>	1
<b>Sub-Section Id :</b>	4855842445
<b>Question Shuffling Allowed :</b>	Yes
<b>Is Section Default? :</b>	null

**Question Number : 421 Question Id : 48558433786 Question Type : MCQ Option Shuffling : No Is Question Mandatory : No Calculator : None Response Time : N.A Think Time : N.A Minimum Instruction Time : 0**

**Correct Marks : 5 Wrong Marks : 1**

**Question Key Details :**

Key	Value
Comprehension	MCQ

What is the basis of creation of the new states of Chattisgarh, Uttarakhand and Jharkhand?

1. Ethnicity
2. Administrative
3. Linguistic
4. Special Status

**Options :**

485584135141. 1  
 485584135142. 2  
 485584135143. 3  
 485584135144. 4

**Question Number : 422 Question Id : 48558433787 Question Type : MCQ Option Shuffling : No Is Question Mandatory : No Calculator : None Response Time : N.A Think Time : N.A Minimum Instruction Time : 0**

**Correct Marks : 5 Wrong Marks : 1**

**Question Key Details :**

Key	Value
Comprehension	MCQ

Policies which are aimed at persuading, encouraging or forcing all citizens to adopt a uniform set of cultural values and norms is called

1. Pluralist
2. Nationalist
3. Assimilationist
4. Multiculturalist

**Options :**

485584135145. 1  
 485584135146. 2

485584135147. 3

485584135148. 4

**Question Number : 423 Question Id : 48558433788 Question Type : MCQ Option Shuffling : No Is Question Mandatory : No Calculator : None Response Time : N.A Think Time : N.A Minimum Instruction Time : 0**

**Correct Marks : 5 Wrong Marks : 1**

**Question Key Details :**

Key	Value
Comprehension	MCQ

According to western context, what does secularism actually denote?

1. Religious Chauvinism
2. Separation of religious and political authority
3. All religions are same and must
4. Keeping away the hostility between religions

**Options :**

485584135149. 1

485584135150. 2

485584135151. 3

485584135152. 4

**Question Number : 424 Question Id : 48558433789 Question Type : MCQ Option Shuffling : No Is Question Mandatory : No Calculator : None Response Time : N.A Think Time : N.A Minimum Instruction Time : 0**

**Correct Marks : 5 Wrong Marks : 1**

**Question Key Details :**

Key	Value
Comprehension	MCQ

Who argued that the nature of urban impact varies according to the kind relation a village has with a city or town?

1. M.S.A. Rao
2. Emile Durkheim
3. M.N. Srinivas
4. Louis Wirth

**Options :**

485584135153. 1

485584135154. 2

485584135155. 3

485584135156. 4

**Question Number : 425 Question Id : 48558433790 Question Type : MCQ Option Shuffling : No Is Question Mandatory : No Calculator : None Response Time : N.A Think Time : N.A Minimum Instruction Time : 0**

**Correct Marks : 5 Wrong Marks : 1**

**Question Key Details :**

Key	Value
-----	-------



Comprehension	MCQ
---------------	-----

The different ways in which British colonialism lives on in contemporary India:

- A. Learning Indian classical music and dance
- B. Eating using fork and spoon
- C. Wearing skirts and trousers
- D. Online education
- E. Driving on the left side of the road

Choose the correct answer from the options given below:

- 1. B, D, E only
- 2. B, C, E only
- 3. A, B, D only
- 4. A, C, D only

**Options :**

- 485584135157. 1
- 485584135158. 2
- 485584135159. 3
- 485584135160. 4

**Question Number : 426 Question Id : 48558433791 Question Type : MCQ Option Shuffling : No Is Question Mandatory : No Calculator : None Response Time : N.A Think Time : N.A Minimum Instruction Time : 0 Correct Marks : 5 Wrong Marks : 1**

**Question Key Details :**

Key	Value
Comprehension	MCQ

High rates of infant mortality and maternal mortality are the result of which factors?

- 1. Poverty and development
- 2. Poverty and illiteracy
- 3. Life expectancy and poverty
- 4. Literacy and development

**Options :**

- 485584135161. 1
- 485584135162. 2
- 485584135163. 3
- 485584135164. 4

**Question Number : 427 Question Id : 48558433792 Question Type : MCQ Option Shuffling : No Is Question Mandatory : No Calculator : None Response Time : N.A Think Time : N.A Minimum Instruction Time : 0 Correct Marks : 5 Wrong Marks : 1**

**Question Key Details :**

Key	Value
Comprehension	MCQ

The NGO, Mahila Samakhya, adopted an innovative method to communicate about the Panchayat Raj system to the women in villages.

1. Documentary
2. Speech
3. Phad
4. Focus group discussion

**Options :**

- 485584135165. 1
- 485584135166. 2
- 485584135167. 3
- 485584135168. 4

**Question Number : 428 Question Id : 48558433793 Question Type : MCQ Option Shuffling : No Is Question Mandatory : No Calculator : None Response Time : N.A Think Time : N.A Minimum Instruction Time : 0**

**Correct Marks : 5 Wrong Marks : 1**

**Question Key Details :**

Key	Value
Comprehension	MCQ

India has which kind of democracy?

1. Direct democracy
2. Representative democracy
3. Indirect democracy
4. Non-representative democracy

**Options :**

- 485584135169. 1
- 485584135170. 2
- 485584135171. 3
- 485584135172. 4

**Question Number : 429 Question Id : 48558433794 Question Type : MCQ Option Shuffling : No Is Question Mandatory : No Calculator : None Response Time : N.A Think Time : N.A Minimum Instruction Time : 0**

**Correct Marks : 5 Wrong Marks : 1**

**Question Key Details :**

Key	Value
Comprehension	MCQ

Opinions that are not fact based can be understood as

1. Prejudice
2. Untouchability
3. Inclusion
4. Exclusion

**Options :**

485584135173. 1  
485584135174. 2  
485584135175. 3  
485584135176. 4

**Question Number : 430 Question Id : 48558433795 Question Type : MCQ Option Shuffling : No Is Question Mandatory : No Calculator : None Response Time : N.A Think Time : N.A Minimum Instruction Time : 0**

**Correct Marks : 5 Wrong Marks : 1**

**Question Key Details :**

Key	Value
Comprehension	MCQ

Match the newspapers in List I with the language in List II

LIST I		LIST II	
A.	Kesari	I.	Malayali
B.	Mathrubhumi	II.	Hindi
C.	Sambad-Kaumudi	III.	Bengali
D.	Amar Ujala	IV.	Marathi

Choose the correct answer from the options given below:

1. A-I, B-II, C-III, D-IV
2. A-IV, B-I, C-III, D-II
3. A-IV, B-II, C-I, D-III
4. A-IV, B-II, C-III, D-I

**Options :**

485584135177. 1  
485584135178. 2  
485584135179. 3  
485584135180. 4

**Question Number : 431 Question Id : 48558433796 Question Type : MCQ Option Shuffling : No Is Question Mandatory : No Calculator : None Response Time : N.A Think Time : N.A Minimum Instruction Time : 0**

**Correct Marks : 5 Wrong Marks : 1**

**Question Key Details :**

Key	Value
Comprehension	MCQ

Why is Demographic Dividend considered temporary?

1. Larger pool of working age people will gradually turn into non-working old age group
2. Larger pool of non-working people will eventually turn into working people
3. Eventually the number of non-working people will be equal to that of working people
4. Larger pool of non-working people will be employed due to Government policies

**Options :**

- 485584135181. 1
- 485584135182. 2
- 485584135183. 3
- 485584135184. 4

**Question Number : 432 Question Id : 48558433797 Question Type : MCQ Option Shuffling : No Is Question Mandatory : No Calculator : None Response Time : N.A Think Time : N.A Minimum Instruction Time : 0**

**Correct Marks : 5 Wrong Marks : 1**

**Question Key Details :**

Key	Value
Comprehension	MCQ

Identify the three villages that were initially brought together to establish the trading post on river Hooghly by the English in 17th century.

1. Kolikata, Maidan, Fort William
2. Sutanuti, Gobindapur, Fort William
3. Sutanuti, Kolikata, Fort William
4. Kolikata, Sutanuti, Gobindapur

**Options :**

- 485584135185. 1
- 485584135186. 2
- 485584135187. 3
- 485584135188. 4

**Question Number : 433 Question Id : 48558433798 Question Type : MCQ Option Shuffling : No Is Question Mandatory : No Calculator : None Response Time : N.A Think Time : N.A Minimum Instruction Time : 0**

**Correct Marks : 5 Wrong Marks : 1**

**Question Key Details :**

Key	Value
Comprehension	MCQ

Who believed that famines are the result of "failure of entitlements"?

1. Karl Marx
2. Amartya Sen
3. Malthus
4. Emile Durkheim

**Options :**

- 485584135189. 1
- 485584135190. 2
- 485584135191. 3
- 485584135192. 4

**Question Number : 434 Question Id : 48558433799 Question Type : MCQ Option Shuffling : No Is Question Mandatory : No Calculator : None Response Time : N.A Think Time : N.A Minimum Instruction Time : 0**

**Correct Marks : 5 Wrong Marks : 1**

**Question Key Details :**

Key	Value
Comprehension	MCQ

When did Right to Information Act came into force?

1. October 13, 2005
2. October 13, 2006
3. June 15, 2005
4. June 15, 2006

**Options :**

- 485584135193. 1
- 485584135194. 2
- 485584135195. 3
- 485584135196. 4

**Question Number : 435 Question Id : 48558433800 Question Type : MCQ Option Shuffling : No Is Question Mandatory : No Calculator : None Response Time : N.A Think Time : N.A Minimum Instruction Time : 0**

**Correct Marks : 5 Wrong Marks : 1**

**Question Key Details :**

Key	Value
Comprehension	MCQ

Identify the key characteristic of social stratification from the list given below:

- A. It is social and not individual in character
- B. Social stratification persists through ideologies and practices
- C. It persists over generations
- D. It is natural
- E. It is not natural

Choose the correct answer from the options given below:

- 1. A, B, C only
- 2. B, C, E only
- 3. D, C, E only
- 4. A, D, E only

**Options :**

- 485584135197. 1
- 485584135198. 2
- 485584135199. 3
- 485584135200. 4

**Question Number : 436 Question Id : 48558433801 Question Type : MCQ Option Shuffling : No Is Question Mandatory : No Calculator : None Response Time : N.A Think Time : N.A Minimum Instruction Time : 0**

**Correct Marks : 5 Wrong Marks : 1**

**Question Key Details :**

Key	Value
Comprehension	MCQ

What does population pyramid show?

- 1. Age, Birth rate, Growth
- 2. Age, Gender, Growth
- 3. Age, Birth rate, Life expectancy
- 4. Birth rate, Gender, Life expectancy

**Options :**

- 485584135201. 1
- 485584135202. 2
- 485584135203. 3
- 485584135204. 4

**Question Number : 437 Question Id : 48558433802 Question Type : MCQ Option Shuffling : No Is Question Mandatory : No Calculator : None Response Time : N.A Think Time : N.A Minimum Instruction Time : 0**

**Correct Marks : 5 Wrong Marks : 1**

**Question Key Details :**

Key	Value
Comprehension	MCQ

Match the books in List I with the authors in List II

LIST I		LIST II	
A.	Stree Purush Tulana	I.	Daya Pawar
B.	The city	II.	Begum Rokeya
C.	Analogy of Religion	III.	Tarabai Shinde
D.	Sultana's Dream	IV.	Bishop Joseph Butler

Choose the correct answer from the options given below:

1. A-I, B-II, C-III, D-IV
2. A-IV, B-I, C-III, D-II
3. A-III, B-I, C-IV, D-II
4. A-IV, B-II, C-III, D-I

**Options :**

485584135205. 1  
485584135206. 2  
485584135207. 3  
485584135208. 4

**Question Number : 438 Question Id : 48558433803 Question Type : MCQ Option Shuffling : No Is Question Mandatory : No Calculator : None Response Time : N.A Think Time : N.A Minimum Instruction Time : 0**

**Correct Marks : 5 Wrong Marks : 1**

**Question Key Details :**

Key	Value
Comprehension	MCQ

The working age group considered for measuring dependency ratio is:

1. 15-64 years
2. 16-64 years
3. 18-70 years
4. 20-50 years

**Options :**

485584135209. 1  
485584135210. 2  
485584135211. 3  
485584135212. 4

**Question Number : 439 Question Id : 48558433804 Question Type : MCQ Option Shuffling : No Is Question Mandatory : No Calculator : None Response Time : N.A Think Time : N.A Minimum Instruction Time : 0**

**Correct Marks : 5 Wrong Marks : 1**

**Question Key Details :**

Key	Value
Comprehension	MCQ

In Madhopur village, 77 out of 298 households work and live in the cities of Bombay and Calcutta. What does the example reflect?

1. Industrialisation
2. Urbanisation
3. Migration
4. Ghettoization

**Options :**

- 485584135213. 1
- 485584135214. 2
- 485584135215. 3
- 485584135216. 4

**Question Number : 440 Question Id : 48558433805 Question Type : MCQ Option Shuffling : No Is Question Mandatory : No Calculator : None Response Time : N.A Think Time : N.A Minimum Instruction Time : 0**

**Correct Marks : 5 Wrong Marks : 1**

**Question Key Details :**

Key	Value
Comprehension	MCQ

Common features of caste system include

- A. equalities within the same caste members
- B. social mobility
- C. occupational link
- D. subdivisions
- E. hierarchical arrangements

Choose the correct answer from the options given below:

1. A, B, C, D only
2. A, B, D, E only
3. B, C, D, E only
4. A, C, D, E only

**Options :**

- 485584135217. 1
- 485584135218. 2
- 485584135219. 3
- 485584135220. 4

**Question Number : 441 Question Id : 48558433806 Question Type : MCQ Option Shuffling : No Is Question Mandatory : No Calculator : None Response Time : N.A Think Time : N.A Minimum Instruction Time : 0**

**Correct Marks : 5 Wrong Marks : 1**

**Question Key Details :**

Key	Value
Comprehension	MCQ



Match the concept in List I with the example in List II

LIST I Concept		LIST II Example	
A.	Weekly market	I.	Use of branded cars
B.	Status symbol	II.	BPO
C.	Commodification	III.	Dhorai
D.	Globalisation	IV.	Sale of kidney to rich patients

Choose the correct answer from the options given below:

1. A-III, B-II, C-I, D-IV
2. A-III, B-IV, C-II, D-I
3. A-III, B-I, C-IV, D-II
4. A-II, B-I, C-III, D-IV

**Options :**

485584135221. 1  
485584135222. 2  
485584135223. 3  
485584135224. 4

**Question Number : 442 Question Id : 48558433807 Question Type : MCQ Option Shuffling : No Is Question Mandatory : No Calculator : None Response Time : N.A Think Time : N.A Minimum Instruction Time : 0**

**Correct Marks : 5 Wrong Marks : 1**

**Question Key Details :**

Key	Value
Comprehension	MCQ

Arrange the states having lowest to highest child sex-ratio as per 2011 Census:

- A. Himachal Pradesh
- B. Kerala
- C. Bihar
- D. Haryana
- E. Rajasthan

Choose the correct answer from the options given below:

1. D, E, A, C, B
2. C, D, A, B, E
3. B, A, D, E, C
4. C, A, D, E, B

**Options :**

485584135225. 1  
485584135226. 2  
485584135227. 3

**Question Number : 443 Question Id : 48558433808 Question Type : MCQ Option Shuffling : No Is Question Mandatory : No Calculator : None Response Time : N.A Think Time : N.A Minimum Instruction Time : 0**

**Correct Marks : 5 Wrong Marks : 1**

**Question Key Details :**

Key	Value
Comprehension	MCQ

Arrange the following groups in an ascending order in terms of their percentage share in the Bidi industry:

- A. Manufacturer
- B. Worker
- C. Contractor
- D. Distributor

Choose the correct answer from the options given below:

- 1. A, C, B, D
- 2. B, C, D, A
- 3. A, B, C, D
- 4. B, D, C, A

**Options :**

- 485584135229. 1
- 485584135230. 2
- 485584135231. 3
- 485584135232. 4

**Question Number : 444 Question Id : 48558433809 Question Type : MCQ Option Shuffling : No Is Question Mandatory : No Calculator : None Response Time : N.A Think Time : N.A Minimum Instruction Time : 0**

**Correct Marks : 5 Wrong Marks : 1**

**Question Key Details :**

Key	Value
Comprehension	MCQ

For migrant workers Jan Breman has used the term:

- 1. Footloose labour
- 2. Loose labour
- 3. Mobile labour
- 4. Migratory labour

**Options :**

- 485584135233. 1
- 485584135234. 2
- 485584135235. 3
- 485584135236. 4

**Question Number : 445 Question Id : 48558433810 Question Type : MCQ Option Shuffling : No Is Question Mandatory : No Calculator : None Response Time : N.A Think Time : N.A Minimum Instruction Time : 0**

**Correct Marks : 5 Wrong Marks : 1**

**Question Key Details :**

Key	Value
Comprehension	MCQ

Identify the permanent traits of tribes from the list provided below:

- A. Language
- B. Mode of livelihood
- C. Region
- D. Extent of incorporation into Hindu society
- E. Physical characteristics

Choose the correct answer from the options given below:

- 1. A, C, E, only
- 2. B, D, E, only
- 3. A, B, C, only
- 4. B, C, E, only

**Options :**

- 485584135237. 1
- 485584135238. 2
- 485584135239. 3
- 485584135240. 4

**Question Number : 446 Question Id : 48558433811 Question Type : MCQ Option Shuffling : No Is Question Mandatory : No Calculator : None Response Time : N.A Think Time : N.A Minimum Instruction Time : 0**

**Correct Marks : 5 Wrong Marks : 1**

**Question Key Details :**

Key	Value
Comprehension	MCQ

Arrange the four-fold division of society into the varna system:

- A. Vaisya
- B. Brahmin
- C. Sudra
- D. Kshatriya

Choose the correct answer from the options given below:

- 1. B, D, A, C
- 2. B, A, C, D
- 3. A, B, C, D
- 4. C, B, D, A

**Options :**

- 485584135241. 1
- 485584135242. 2
- 485584135243. 3
- 485584135244. 4

**Question Number : 447 Question Id : 48558433812 Question Type : MCQ Option Shuffling : No Is Question Mandatory : No Calculator : None Response Time : N.A Think Time : N.A Minimum Instruction Time : 0**

**Correct Marks : 5 Wrong Marks : 1**

**Question Key Details :**

Key	Value
Comprehension	MCQ

Impact of urbanization on peripheral villages:

- A. People build fashionable houses
- B. Pressure on resources
- C. Conflicts between migrants and villagers
- D. Out migration
- E. Uprooting villagers from their land

Choose the correct answer from the options given below:

- 1. A, C, D, E, only
- 2. A, B, C, D only
- 3. A, B, C, E only
- 4. B, C, D, E only

**Options :**

- 485584135245. 1
- 485584135246. 2
- 485584135247. 3
- 485584135248. 4

**Question Number : 448 Question Id : 48558433813 Question Type : MCQ Option Shuffling : No Is Question Mandatory : No Calculator : None Response Time : N.A Think Time : N.A Minimum Instruction Time : 0**

**Correct Marks : 5 Wrong Marks : 1**

**Question Key Details :**

Key	Value
Comprehension	MCQ

The situation where people do not enjoy work and see it as something they have to do only for livelihood is described as:

- 1. Exploitation
- 2. Alienation
- 3. Marginalization
- 4. Discrimination

**Options :**

485584135249. 1  
485584135250. 2  
485584135251. 3  
485584135252. 4

**Question Number : 449 Question Id : 48558433814 Question Type : MCQ Option Shuffling : No Is Question Mandatory :  
No Calculator : None Response Time : N.A Think Time : N.A Minimum Instruction Time : 0**

**Correct Marks : 5 Wrong Marks : 1**

**Question Key Details :**

Key	Value
Comprehension	MCQ

From the choices given below choose the scheme associated with providing help to the farmers.

1. Beti bachao, Beti padhao
2. Green revolution
3. Pradhan Mantri Fasal Bima Yojana
4. Land Ceiling Act

**Options :**

485584135253. 1  
485584135254. 2  
485584135255. 3  
485584135256. 4

**Question Number : 450 Question Id : 48558433815 Question Type : MCQ Option Shuffling : No Is Question Mandatory :  
No Calculator : None Response Time : N.A Think Time : N.A Minimum Instruction Time : 0**

**Correct Marks : 5 Wrong Marks : 1**

**Question Key Details :**

Key	Value
Comprehension	MCQ

Match the concept in List I with the explanation in List II

LIST I Concept		LIST II Explanation	
A.	Preventive checks	I.	Number of females per 1000 males in a given area at a specified time period
B.	Positive checks	II.	Estimated number of years that an average person is expected to survive
C.	Life expectancy	III.	Voluntary action to reduce population (like postponing marriage)
D.	Sex-ratio	IV.	Involuntary events to reduce population (like famine)

Choose the correct answer from the options given below:

1. A-IV, B-III, C-II, D-I
2. A-III, B-IV, C-II, D-I
3. A-IV, B-II, C-III, D-I
4. A-I, B-II, C-III, D-IV

**Options :**

485584135257. 1  
 485584135258. 2  
 485584135259. 3  
 485584135260. 4

**Question Number : 451 Question Id : 48558433816 Question Type : MCQ Option Shuffling : No Is Question Mandatory : No Calculator : None Response Time : N.A Think Time : N.A Minimum Instruction Time : 0**

**Correct Marks : 5 Wrong Marks : 1**

**Question Key Details :**

Key	Value
Comprehension	MCQ

The work culture where workers work for extended hours beyond the regular time either to complete the project or please the boss is called:

1. Flexi-time
2. Night out
3. Time slavery
4. Work pressure

**Options :**

485584135261. 1  
 485584135262. 2  
 485584135263. 3  
 485584135264. 4

Question Number : 452 Question Id : 48558433817 Question Type : MCQ Option Shuffling : No Is Question Mandatory : No Calculator : None Response Time : N.A Think Time : N.A Minimum Instruction Time : 0

Correct Marks : 5 Wrong Marks : 1

Question Key Details :

Key	Value
Comprehension	MCQ

Recent developments in Varanasi and its promotion in media made the city an attractive tourist spot. With which theory can this example be associated with?

1. Corporate culture
2. Culture of consumption
3. Globalization of culture
4. Conscious consumption

Options :

- 485584135265. 1
- 485584135266. 2
- 485584135267. 3
- 485584135268. 4

Question Number : 453 Question Id : 48558433818 Question Type : MCQ Option Shuffling : No Is Question Mandatory : No Calculator : None Response Time : N.A Think Time : N.A Minimum Instruction Time : 0

Correct Marks : 5 Wrong Marks : 1

Question Key Details :

Key	Value
Comprehension	MCQ

Arrange in a chronological manner from earliest to latest developments:

- A. SRC mandated redrawing of the map of India on linguistic lines
- B. Many feared that states based on language will hasten further division of India
- C. Indian National Congress was constituted on linguistic lines
- D. India became independent but was partitioned along religious lines
- E. Creation of Andhra Pradesh after the death of Potti Sriramulu

Choose the correct answer from the options given below:

1. C, D, B, E, A
2. A, B, D, C, B
3. A, B, D, C, E
4. D, C, B, A, E

Options :

- 485584135269. 1
- 485584135270. 2
- 485584135271. 3
- 485584135272. 4

Question Number : 454 Question Id : 48558433819 Question Type : MCQ Option Shuffling : No Is Question Mandatory : No Calculator : None Response Time : N.A Think Time : N.A Minimum Instruction Time : 0

Correct Marks : 5 Wrong Marks : 1

Question Key Details :

Key	Value
Comprehension	MCQ

A movement that is aimed in bringing change in the personal consciousness and actions of individual members is called:

1. Reformist social movement
2. Revolutionary social movement
3. Historical social movement
4. Redemptive social movement

Options :

- 485584135273. 1
- 485584135274. 2
- 485584135275. 3
- 485584135276. 4

Question Number : 455 Question Id : 48558433820 Question Type : MCQ Option Shuffling : No Is Question Mandatory : No Calculator : None Response Time : N.A Think Time : N.A Minimum Instruction Time : 0

Correct Marks : 5 Wrong Marks : 1

Question Key Details :

Key	Value
Comprehension	MCQ

Match the laws in List I with the year adopted in List II

LIST I Laws/Acts		LIST II Year of Adoption/Passing	
A.	Caste Disabilities Removal Act	I.	1989
B.	Constitution Amendment (93rd) Act	II.	1950
C.	(Article 17) Abolishing of Untouchability	III.	1850
D.	Prevention of Atrocities Act	IV.	2006

Choose the correct answer from the options given below:

1. A-I, B-II, C-III, D-IV
2. A-IV, B-III, C-II, D-I
3. A-III, B-IV, C-II, D-I
4. A-IV, B-II, C-I, D-III

Options :

- 485584135277. 1



485584135278. 2  
485584135279. 3  
485584135280. 4

**Question Number : 456 Question Id : 48558433821 Question Type : MCQ Option Shuffling : No Is Question Mandatory : No Calculator : None Response Time : N.A Think Time : N.A Minimum Instruction Time : 0**

**Correct Marks : 5 Wrong Marks : 1**

**Question Key Details :**

Key	Value
Comprehension	MCQ

The floods caused by the unusually heavy monsoon in the Alaknanda valley marked a turning point in the ecological history of the region. What is being referred to here?

1. Budhan movement
2. Chipko movement
3. Swacch Bharat Mission
4. Namami Gange Project

**Options :**

485584135281. 1  
485584135282. 2  
485584135283. 3  
485584135284. 4

**Question Number : 457 Question Id : 48558433822 Question Type : MCQ Option Shuffling : No Is Question Mandatory : No Calculator : None Response Time : N.A Think Time : N.A Minimum Instruction Time : 0**

**Correct Marks : 5 Wrong Marks : 1**

**Question Key Details :**

Key	Value
Comprehension	MCQ

Who is associated with the anti-caste movement in 19th century?

1. Mahatma Gandhi
2. Jyotiba Phule
3. Raja Rammohan Roy
4. Birsa Munda

**Options :**

485584135285. 1  
485584135286. 2  
485584135287. 3  
485584135288. 4

**Question Number : 458 Question Id : 48558433823 Question Type : MCQ Option Shuffling : No Is Question Mandatory : No Calculator : None Response Time : N.A Think Time : N.A Minimum Instruction Time : 0**

**Correct Marks : 5 Wrong Marks : 1**

**Question Key Details :**

Key	Value
Comprehension	MCQ

Arrange the following newspapers in order of their year of publication from the earliest to the latest.

- A. The Madras Mail
- B. The Statesman
- C. The Times of India
- D. The Pioneer
- E. The Civil and Military Gazettee

Choose the correct answer from the options given below:

- 1. C, D, A, B, E
- 2. B, D, C, A, E
- 3. A, B, E, D, C
- 4. A, C, B, E, D

**Options :**

- 485584135289. 1
- 485584135290. 2
- 485584135291. 3
- 485584135292. 4

**Question Number : 459 Question Id : 48558433824 Question Type : MCQ Option Shuffling : No Is Question Mandatory : No Calculator : None Response Time : N.A Think Time : N.A Minimum Instruction Time : 0**

**Correct Marks : 5 Wrong Marks : 1**

**Question Key Details :**

Key	Value
Comprehension	MCQ

One of the key issues that bind the tribal movement across India.

- 1. Over exploitation
- 2. Language
- 3. Alienation from forest lands
- 4. Ethnicity

**Options :**

- 485584135293. 1
- 485584135294. 2
- 485584135295. 3
- 485584135296. 4

**Question Number : 460 Question Id : 48558433825 Question Type : MCQ Option Shuffling : No Is Question Mandatory : No Calculator : None Response Time : N.A Think Time : N.A Minimum Instruction Time : 0**

**Correct Marks : 5 Wrong Marks : 1**

**Question Key Details :**

Key	Value
-----	-------

Comprehension	MCQ
---------------	-----

What was the common demand among the jute workers of Kolkata, cotton mill workers of Buckingham and Ahmedabad?

1. Better working conditions
2. 25% increase of wages
3. 50% increase of wages
4. Less working hours

**Options :**

485584135297. 1  
485584135298. 2  
485584135299. 3  
485584135300. 4

**Sub-Section Number :** 2  
**Sub-Section Id :** 4855842446  
**Question Shuffling Allowed :** No  
**Is Section Default? :** null

**Question Number : 461 Question Id : 48558433826 Question Type : MCQ Option Shuffling : No Is Question Mandatory : No Calculator : None Response Time : N.A Think Time : N.A Minimum Instruction Time : 0**

**Correct Marks : 5 Wrong Marks : 1**

**Question Key Details :**

Key	Value
Comprehension	Comp1

Read the passage and answer the questions:

Regionalism in India is rooted in India's diversity of languages, cultures, tribes and religions. It is also encouraged by the geographical concentration of these identity workers in particular regions and fuelled by a sense of regional deprivation. Indian federalism has been a means of accommodating these regional sentiments.

After independence, initially the Indian state continued with the British-Indian arrangement, dividing India into large provinces, also called 'Presidencies'. These were large multi-ethnic and multilingual provincial states constituting the major political-administrative units of a semi-federal state called the Union of India. Languages coupled with regional and tribal identity and not religion has therefore provided the most powerful instrument for the formation of ethno-rational identity in India.

The three major factors for the formation of ethno-rational identity in India are:

1. Linguistic, tribal and religious identity
2. Linguistic, caste and tribal identity
3. Regional, linguistic and tribal identity
4. Religious, linguistic and caste identity

**Options :**

- 485584135301. 1
- 485584135302. 2
- 485584135303. 3
- 485584135304. 4

**Question Number : 462 Question Id : 48558433827 Question Type : MCQ Option Shuffling : No Is Question Mandatory : No Calculator : None Response Time : N.A Think Time : N.A Minimum Instruction Time : 0**

**Correct Marks : 5 Wrong Marks : 1**

**Question Key Details :**

Key	Value
Comprehension	Comp1

Read the passage and answer the questions:

Regionalism in India is rooted in India's diversity of languages, cultures, tribes and religions. It is also encouraged by the geographical concentration of these identity workers in particular regions and fuelled by a sense of regional deprivation. Indian federalism has been a means of accommodating these regional sentiments.

After independence, initially the Indian state continued with the British-Indian arrangement, dividing India into large provinces, also called 'Presidencies'. These were large multi-ethnic and multilingual provincial states constituting the major political-administrative units of a semi-federal state called the Union of India. Languages coupled with regional and tribal identity and not religion has therefore provided the most powerful instrument for the formation of ethno-rational identity in India.

Which of the following cultural markers is not responsible for regionalism in India?

- 1. Tribe
- 2. Caste
- 3. Religion
- 4. Language

**Options :**

- 485584135305. 1
- 485584135306. 2
- 485584135307. 3
- 485584135308. 4

**Question Number : 463 Question Id : 48558433828 Question Type : MCQ Option Shuffling : No Is Question Mandatory : No Calculator : None Response Time : N.A Think Time : N.A Minimum Instruction Time : 0**

**Correct Marks : 5 Wrong Marks : 1**

**Question Key Details :**

Key	Value
Comprehension	Comp1

Read the passage and answer the questions:

Regionalism in India is rooted in India's diversity of languages, cultures, tribes and religions. It is also encouraged by the geographical concentration of these identity workers in particular regions and fuelled by a sense of regional deprivation. Indian federalism has been a means of accommodating these regional sentiments.

After independence, initially the Indian state continued with the British-Indian arrangement, dividing India into large provinces, also called 'Presidencies'. These were large multi-ethnic and multilingual provincial states constituting the major political-administrative units of a semi-federal state called the Union of India. Languages coupled with regional and tribal identity and not religion has therefore provided the most powerful instrument for the formation of ethno-rational identity in India.

During British period, India was divided into large provinces called

1. Principalities
2. State
3. Princely states
4. Presidencies

**Options :**

- 485584135309. 1
- 485584135310. 2
- 485584135311. 3
- 485584135312. 4

**Question Number : 464 Question Id : 48558433829 Question Type : MCQ Option Shuffling : No Is Question Mandatory : No Calculator : None Response Time : N.A Think Time : N.A Minimum Instruction Time : 0**

**Correct Marks : 5 Wrong Marks : 1**

**Question Key Details :**

Key	Value
Comprehension	Compl

Read the passage and answer the questions:

Regionalism in India is rooted in India's diversity of languages, cultures, tribes and religions. It is also encouraged by the geographical concentration of these identity workers in particular regions and fuelled by a sense of regional deprivation. Indian federalism has been a means of accommodating these regional sentiments.

After independence, initially the Indian state continued with the British-Indian arrangement, dividing India into large provinces, also called 'Presidencies'. These were large multi-ethnic and multilingual provincial states constituting the major political-administrative units of a semi-federal state called the Union of India. Languages coupled with regional and tribal identity and not religion has therefore provided the most powerful instrument for the formation of ethno-rational identity in India.

The term used for addressing the existence of diversity of languages is

1. Multi-lingual
2. Multicultural
3. Multi-ethnic
4. Mono-lingual

**Options :**

485584135313. 1  
485584135314. 2  
485584135315. 3  
485584135316. 4

**Question Number : 465 Question Id : 48558433830 Question Type : MCQ Option Shuffling : No Is Question Mandatory : No Calculator : None Response Time : N.A Think Time : N.A Minimum Instruction Time : 0**

**Correct Marks : 5 Wrong Marks : 1**

**Question Key Details :**

Key	Value
Comprehension	Comp1

Read the passage and answer the questions:

Regionalism in India is rooted in India's diversity of languages, cultures, tribes and religions. It is also encouraged by the geographical concentration of these identity workers in particular regions and fuelled by a sense of regional deprivation. Indian federalism has been a means of accommodating these regional sentiments.

After independence, initially the Indian state continued with the British-Indian arrangement, dividing India into large provinces, also called 'Presidencies'. These were large multi-ethnic and multilingual provincial states constituting the major political-administrative units of a semi-federal state called the Union of India. Languages coupled with regional and tribal identity and not religion has therefore provided the most powerful instrument for the formation of ethno-rational identity in India.

For the growth of regionalism, the prerequisite is

1. Sense of being dominant
2. Sense of deprivation
3. Sense of empowerment
4. Sense of advancement

**Options :**

485584135317. 1  
485584135318. 2  
485584135319. 3  
485584135320. 4

**Sub-Section Number :**

3

**Sub-Section Id :**

4855842447

Question Shuffling Allowed :

No

Is Section Default? :

null

Question Number : 466 Question Id : 48558433831 Question Type : MCQ Option Shuffling : No Is Question Mandatory : No Calculator : None Response Time : N.A Think Time : N.A Minimum Instruction Time : 0

Correct Marks : 5 Wrong Marks : 1

Question Key Details :

Key	Value
Comprehension	Comp2

Read the passage and answer the following questions:

These are indicators of the process of globalisation of agriculture, or the incorporation of agriculture into the larger global market - a process that has had direct effects on farmers and rural society. For instance, in some regions such as Punjab and Karnataka, farmers enter into contracts with multinational companies (such as PepsiCo) to grow certain crops (such as tomatoes and potatoes), which the companies then buy from them for processing or export. In such 'contract farming' systems, the company identifies the crops to be grown, provides the seeds and other inputs, as well as the knowhow and often also the working capital. In return, the farmer is assured of a market because the company guarantees that it will purchase the produce at a predetermined fixed price. Contract farming is very common now in the production of specialised items such as cut flowers, fruits such as grapes, figs and pomegranates, cotton and oil seeds. While contract farming appears to provide financial security to farmers, it can also lead to greater insecurity as farmers become dependent on these companies for their livelihoods. Contract farming of export-oriented products such as flowers and gherkins also means that agricultural land is diverted from food grain production. Contract farming has sociological significance in that it disengages many people from the production process and makes their own indigenous knowledge of agriculture irrelevant. In addition, contract farming caters primarily to the production of elite items, and because it usually requires high doses of fertilisers and pesticides, it is often not ecologically sustainable.

Contract farming happens for:

1. Cash crops only
2. Food crops only
3. Oil seeds and cotton
4. Food processing industry

Options :

485584135321. 1

485584135322. 2

485584135323. 3

485584135324. 4

Question Number : 467 Question Id : 48558433832 Question Type : MCQ Option Shuffling : No Is Question Mandatory : No Calculator : None Response Time : N.A Think Time : N.A Minimum Instruction Time : 0

Correct Marks : 5 Wrong Marks : 1

Question Key Details :

Key	Value
Comprehension	Comp2

Read the passage and answer the following questions:

These are indicators of the process of globalisation of agriculture, or the incorporation of agriculture into the larger global market - a process that has had direct effects on farmers and rural society. For instance, in some regions such as Punjab and Karnataka, farmers enter into contracts with multinational companies (such as PepsiCo) to grow certain crops (such as tomatoes and potatoes), which the companies then buy from them for processing or export. In such 'contract farming' systems, the company identifies the crops to be grown, provides the seeds and other inputs, as well as the knowhow and often also the working capital. In return, the farmer is assured of a market because the company guarantees that it will purchase the produce at a predetermined fixed price. Contract farming is very common now in the production of specialised items such as cut flowers, fruits such as grapes, figs and pomegranates, cotton and oil seeds. While contract farming appears to provide financial security to farmers, it can also lead to greater insecurity as farmers become dependent on these companies for their livelihoods. Contract farming of export-oriented products such as flowers and gherkins also means that agricultural land is diverted from food grain production. Contract farming has sociological significance in that it disengages many people from the production process and makes their own indigenous knowledge of agriculture irrelevant. In addition, contract farming caters primarily to the production of elite items, and because it usually requires high doses of fertilisers and pesticides, it is often not ecologically sustainable.

The change in the nature of relationship between landlords and agricultural workers has been described by the sociologist Jan Brewman as:

1. shift from patronage to exploitation
2. shift from ownership to tenancy
3. withdrawal from subsistence farming
4. withdrawal from agriculture

**Options :**

- 485584135325. 1
- 485584135326. 2
- 485584135327. 3
- 485584135328. 4

**Question Number : 468 Question Id : 48558433833 Question Type : MCQ Option Shuffling : No Is Question Mandatory : No Calculator : None Response Time : N.A Think Time : N.A Minimum Instruction Time : 0**

**Correct Marks : 5 Wrong Marks : 1**

**Question Key Details :**

Key	Value
Comprehension	Comp2



Read the passage and answer the following questions:

These are indicators of the process of globalisation of agriculture, or the incorporation of agriculture into the larger global market - a process that has had direct effects on farmers and rural society. For instance, in some regions such as Punjab and Karnataka, farmers enter into contracts with multinational companies (such as PepsiCo) to grow certain crops (such as tomatoes and potatoes), which the companies then buy from them for processing or export. In such 'contract farming' systems, the company identifies the crops to be grown, provides the seeds and other inputs, as well as the knowhow and often also the working capital. In return, the farmer is assured of a market because the company guarantees that it will purchase the produce at a predetermined fixed price. Contract farming is very common now in the production of specialised items such as cut flowers, fruits such as grapes, figs and pomegranates, cotton and oil seeds. While contract farming appears to provide financial security to farmers, it can also lead to greater insecurity as farmers become dependent on these companies for their livelihoods. Contract farming of export-oriented products such as flowers and gherkins also means that agricultural land is diverted from food grain production. Contract farming has sociological significance in that it disengages many people from the production process and makes their own indigenous knowledge of agriculture irrelevant. In addition, contract farming caters primarily to the production of elite items, and because it usually requires high doses of fertilisers and pesticides, it is often not ecologically sustainable.

Who decides the crop to be grown under contract farming?

1. Farmer
2. Tenants
3. Labourer
4. Company

**Options :**

- 485584135329. 1
- 485584135330. 2
- 485584135331. 3
- 485584135332. 4

**Question Number : 469 Question Id : 48558433834 Question Type : MCQ Option Shuffling : No Is Question Mandatory : No Calculator : None Response Time : N.A Think Time : N.A Minimum Instruction Time : 0**

**Correct Marks : 5 Wrong Marks : 1**

**Question Key Details :**

Key	Value
Comprehension	Comp2

Read the passage and answer the following questions:

These are indicators of the process of globalisation of agriculture, or the incorporation of agriculture into the larger global market - a process that has had direct effects on farmers and rural society. For instance, in some regions such as Punjab and Karnataka, farmers enter into contracts with multinational companies (such as PepsiCo) to grow certain crops (such as tomatoes and potatoes), which the companies then buy from them for processing or export. In such 'contract farming' systems, the company identifies the crops to be grown, provides the seeds and other inputs, as well as the knowhow and often also the working capital. In return, the farmer is assured of a market because the company guarantees that it will purchase the produce at a predetermined fixed price. Contract farming is very common now in the production of specialised items such as cut flowers, fruits such as grapes, figs and pomegranates, cotton and oil seeds. While contract farming appears to provide financial security to farmers, it can also lead to greater insecurity as farmers become dependent on these companies for their livelihoods. Contract farming of export-oriented products such as flowers and gherkins also means that agricultural land is diverted from food grain production. Contract farming has sociological significance in that it disengages many people from the production process and makes their own indigenous knowledge of agriculture irrelevant. In addition, contract farming caters primarily to the production of elite items, and because it usually requires high doses of fertilisers and pesticides, it is often not ecologically sustainable.

Out of the following, which is not a demerit of contract farming?

1. Provides financial security to the farmer
2. Indigenous knowledge becomes irrelevant regarding agriculture
3. Ecologically not sustainable
4. Does not produce for the masses

**Options :**

485584135333. 1  
485584135334. 2  
485584135335. 3  
485584135336. 4

**Question Number : 470 Question Id : 48558433835 Question Type : MCQ Option Shuffling : No Is Question Mandatory : No Calculator : None Response Time : N.A Think Time : N.A Minimum Instruction Time : 0**

**Correct Marks : 5 Wrong Marks : 1**

**Question Key Details :**

Key	Value
Comprehension	Comp2

Read the passage and answer the following questions:

These are indicators of the process of globalisation of agriculture, or the incorporation of agriculture into the larger global market - a process that has had direct effects on farmers and rural society. For instance, in some regions such as Punjab and Karnataka, farmers enter into contracts with multinational companies (such as PepsiCo) to grow certain crops (such as tomatoes and potatoes), which the companies then buy from them for processing or export. In such 'contract farming' systems, the company identifies the crops to be grown, provides the seeds and other inputs, as well as the knowhow and often also the working capital. In return, the farmer is assured of a market because the company guarantees that it will purchase the produce at a predetermined fixed price. Contract farming is very common now in the production of specialised items such as cut flowers, fruits such as grapes, figs and pomegranates, cotton and oil seeds. While contract farming appears to provide financial security to farmers, it can also lead to greater insecurity as farmers become dependent on these companies for their livelihoods. Contract farming of export-oriented products such as flowers and gherkins also means that agricultural land is diverted from food grain production. Contract farming has sociological significance in that it disengages many people from the production process and makes their own indigenous knowledge of agriculture irrelevant. In addition, contract farming caters primarily to the production of elite items, and because it usually requires high doses of fertilisers and pesticides, it is often not ecologically sustainable.

The system described in the passage is possible due to which process?

1. Globalisation
2. Contract farming
3. Trans National Corporation
4. Glocalisation

**Options :**

- 485584135337. 1
- 485584135338. 2
- 485584135339. 3
- 485584135340. 4

### General Test

<b>Group Number :</b>	13
<b>Group Id :</b>	485584751
<b>Group Maximum Duration :</b>	60
<b>Group Minimum Duration :</b>	60
<b>Show Attended Group? :</b>	No
<b>Edit Attended Group? :</b>	No
<b>Break time :</b>	0
<b>Group Marks :</b>	250
<b>Is this Group for Examiner? :</b>	No
<b>Examiner permission :</b>	Cant View
<b>Show Progress Bar? :</b>	No

### General Test

**Section Id :** 485584869  
**Section Number :** 1  
**Section type :** Online  
**Mandatory or Optional :** Mandatory  
**Number of Questions :** 60  
**Number of Questions to be attempted :** 50  
**Section Marks :** 250  
**Enable Mark as Answered Mark for Review and Clear Response :** Yes  
**Maximum Instruction Time :** 0  
**Sub-Section Number :** 1  
**Sub-Section Id :** 4855842448  
**Question Shuffling Allowed :** Yes  
**Is Section Default? :** null

**Question Number : 471 Question Id : 48558433886 Question Type : MCQ Option Shuffling : No Is Question Mandatory : No Calculator : None Response Time : N.A Think Time : N.A Minimum Instruction Time : 0**

**Correct Marks : 5 Wrong Marks : 1**

**Question Key Details :**

Key	Value
Comprehension	MCQ

The C.P. of two shirts taken together is ₹910. If by selling one at a profit of 16% and the other at a loss of 12%, there is no loss or gain in the whole transaction, then the C.P. of the two shirts are respectively:

1. 380, 530

2. 370, 540

3. 390, 520

4. 400, 510

**Options :**

485584135541. 1

485584135542. 2

485584135543. 3

485584135544. 4

**Question Number : 472 Question Id : 48558433887 Question Type : MCQ Option Shuffling : No Is Question Mandatory : No Calculator : None Response Time : N.A Think Time : N.A Minimum Instruction Time : 0**

**Correct Marks : 5 Wrong Marks : 1**

**Question Key Details :**

Key	Value
Comprehension	MCQ

Heera purchased a bag for ₹4500 and sold it for ₹8,200. What is the profit percentage? (Correct to two places of decimal)

1. 82.22

2. 73.62

3. 45.12

4. 52.42

**Options :**

485584135545. 1

485584135546. 2

485584135547. 3

485584135548. 4

**Question Number : 473 Question Id : 48558433888 Question Type : MCQ Option Shuffling : No Is Question Mandatory : No Calculator : None Response Time : N.A Think Time : N.A Minimum Instruction Time : 0**

**Correct Marks : 5 Wrong Marks : 1**

**Question Key Details :**

Key	Value
Comprehension	MCQ

What is the value of  ${}^{81}P_2 - {}^{81}C_2$  ?

1. 6480

2. 3240

3. 2775

4. 5040

**Options :**

485584135549. 1

485584135550. 2

485584135551. 3

485584135552. 4

**Question Number : 474 Question Id : 48558433889 Question Type : MCQ Option Shuffling : No Is Question Mandatory : No Calculator : None Response Time : N.A Think Time : N.A Minimum Instruction Time : 0**

**Correct Marks : 5 Wrong Marks : 1**

**Question Key Details :**

Key	Value
Comprehension	MCQ

If  ${}^nC_9 = {}^nC_3$ , what is  $n$  ?

1. 10

2. 11

3. 12

4. 13

**Options :**

485584135553. 1

485584135554. 2

485584135555. 3

485584135556. 4

**Question Number : 475 Question Id : 48558433890 Question Type : MCQ Option Shuffling : No Is Question Mandatory : No Calculator : None Response Time : N.A Think Time : N.A Minimum Instruction Time : 0**

**Correct Marks : 5 Wrong Marks : 1**

**Question Key Details :**

Key	Value
Comprehension	MCQ

The Curved Surface Area of a right circular cylinder of base radius  $r$  is obtained by multiplying its volume:

1.  $2r^2$

2.  $\frac{2}{r^2}$

3.  $2r$

4.  $\frac{2}{r}$

**Options :**

485584135557. 1

485584135558. 2

485584135559. 3

485584135560. 4

**Question Number : 476 Question Id : 48558433891 Question Type : MCQ Option Shuffling : No Is Question Mandatory : No Calculator : None Response Time : N.A Think Time : N.A Minimum Instruction Time : 0**

**Correct Marks : 5 Wrong Marks : 1**

**Question Key Details :**

Key	Value
Comprehension	MCQ

Match List I with List II

LIST I		LIST II	
A.	Volume of cone	I.	$\frac{1}{3}\pi h(r_1^2 + r_2^2 + r_1r_2)$
B.	Volume of sphere	II.	$\frac{4}{3}\pi r^3$
C.	Volume of Frustum	III.	$\frac{1}{3}\pi r^2 h$
D.	Volume of cylinder	IV.	$\pi r^2 h$

Choose the correct answer from the options given below:

1. A-IV, B-I, C-III, D-II
2. A-III, B-IV, C-II, D-I
3. A-I, B-II, C-III, D-IV
4. A-II, B-IV, C-I, D-III

**Options :**

485584135561. 1  
485584135562. 2  
485584135563. 3  
485584135564. 4

**Question Number : 477 Question Id : 48558433892 Question Type : MCQ Option Shuffling : No Is Question Mandatory : No Calculator : None Response Time : N.A Think Time : N.A Minimum Instruction Time : 0**

**Correct Marks : 5 Wrong Marks : 1**

**Question Key Details :**

Key	Value
Comprehension	MCQ

A sum of money triples itself in 3 years at simple interest. In how many years will it become 9 times of itself?

1. 9 years
2. 10 years
3. 12 years
4. 8 years

**Options :**

485584135565. 1  
485584135566. 2  
485584135567. 3  
485584135568. 4

**Question Number : 478 Question Id : 48558433893 Question Type : MCQ Option Shuffling : No Is Question Mandatory : No Calculator : None Response Time : N.A Think Time : N.A Minimum Instruction Time : 0**

Correct Marks : 5 Wrong Marks : 1

Question Key Details :

Key	Value
Comprehension	MCQ

At what rate of simple interest, a sum of ₹1,800 will become ₹2,700 in 10 years?

1. 10%
2. 6%
3. 6.75%
4. 5%

Options :

485584135569. 1  
485584135570. 2  
485584135571. 3  
485584135572. 4

Question Number : 479 Question Id : 48558433894 Question Type : MCQ Option Shuffling : No Is Question Mandatory : No Calculator : None Response Time : N.A Think Time : N.A Minimum Instruction Time : 0

Correct Marks : 5 Wrong Marks : 1

Question Key Details :

Key	Value
Comprehension	MCQ

Where does the point P (-5, 0) lies?

1. Third quadrant
2. y-axis
3. x-axis
4. Fourth quadrant

Options :

485584135573. 1  
485584135574. 2  
485584135575. 3  
485584135576. 4

Question Number : 480 Question Id : 48558433895 Question Type : MCQ Option Shuffling : No Is Question Mandatory : No Calculator : None Response Time : N.A Think Time : N.A Minimum Instruction Time : 0

Correct Marks : 5 Wrong Marks : 1

Question Key Details :

Key	Value
Comprehension	MCQ



If P, R, T are the areas of parallelogram, a rhombus and a triangle standing on the same base and between the same parallel lines, then which of the following is true?

1.  $R < P < T$
2.  $P > R > T$
3.  $R = P = T$
4.  $R = P = 2T$

**Options :**

- 485584135577. 1
- 485584135578. 2
- 485584135579. 3
- 485584135580. 4

**Question Number : 481 Question Id : 48558433896 Question Type : MCQ Option Shuffling : No Is Question Mandatory : No Calculator : None Response Time : N.A Think Time : N.A Minimum Instruction Time : 0**

**Correct Marks : 5 Wrong Marks : 1**

**Question Key Details :**

Key	Value
Comprehension	MCQ

Given expression:

$$\frac{(0.682)^2 - (0.318)^2}{0.682 - 0.318}$$

1. 2
2. 4
3. 1
4. 5

**Options :**

- 485584135581. 1
- 485584135582. 2
- 485584135583. 3
- 485584135584. 4

**Question Number : 482 Question Id : 48558433897 Question Type : MCQ Option Shuffling : No Is Question Mandatory : No Calculator : None Response Time : N.A Think Time : N.A Minimum Instruction Time : 0**

**Correct Marks : 5 Wrong Marks : 1**

**Question Key Details :**

Key	Value
Comprehension	MCQ

A man goes uphill with an average speed of 24 km/h and comes down with an average speed of 36 km/h. The distance travelled in both cases being the same. The average speed for the entire journey is:

1. 30 km/h
2. 28.8 km/h
3. 32 km/h
4. 45 km/h

**Options :**

485584135585. 1  
485584135586. 2  
485584135587. 3  
485584135588. 4

**Question Number : 483 Question Id : 48558433898 Question Type : MCQ Option Shuffling : No Is Question Mandatory : No Calculator : None Response Time : N.A Think Time : N.A Minimum Instruction Time : 0**

**Correct Marks : 5 Wrong Marks : 1**

**Question Key Details :**

Key	Value
Comprehension	MCQ

A 300 m long train is moving at a speed of 60 km/h. In what time will it cross a single pole?

1. 25 sec
2. 30 sec
3. 18 sec
4. 12 sec

**Options :**

485584135589. 1  
485584135590. 2  
485584135591. 3  
485584135592. 4

**Question Number : 484 Question Id : 48558433899 Question Type : MCQ Option Shuffling : No Is Question Mandatory : No Calculator : None Response Time : N.A Think Time : N.A Minimum Instruction Time : 0**

**Correct Marks : 5 Wrong Marks : 1**

**Question Key Details :**

Key	Value
Comprehension	MCQ

In a polyhedron, the number of faces is 4 and the number of edges is 6, then the number of vertices of that polyhedron is:

1. 1
2. 2
3. 3
4. 4

**Options :**

- 485584135593. 1
- 485584135594. 2
- 485584135595. 3
- 485584135596. 4

**Question Number : 485 Question Id : 48558433900 Question Type : MCQ Option Shuffling : No Is Question Mandatory : No Calculator : None Response Time : N.A Think Time : N.A Minimum Instruction Time : 0**

**Correct Marks : 5 Wrong Marks : 1**

**Question Key Details :**

Key	Value
Comprehension	MCQ

The number  $0.\overline{423}$  converted to a fraction, then it is equal to:

1.  $\frac{1147}{300}$
2.  $\frac{419}{900}$
3.  $\frac{419}{990}$
4.  $\frac{423}{100}$

**Options :**

- 485584135597. 1
- 485584135598. 2
- 485584135599. 3
- 485584135600. 4

**Question Number : 486 Question Id : 48558433901 Question Type : MCQ Option Shuffling : No Is Question Mandatory : No Calculator : None Response Time : N.A Think Time : N.A Minimum Instruction Time : 0**

**Correct Marks : 5 Wrong Marks : 1**

**Question Key Details :**

Key	Value
Comprehension	MCQ

Which of the following is called 'Trapezium'?

1. All the sides are equal
2. Two opposite parallel sides are equal
3. Two opposite sides are parallel and two opposite sides are non-parallel
4. A pair of adjacent sides are equal

**Options :**

485584135601. 1  
485584135602. 2  
485584135603. 3  
485584135604. 4

**Question Number : 487 Question Id : 48558433902 Question Type : MCQ Option Shuffling : No Is Question Mandatory : No Calculator : None Response Time : N.A Think Time : N.A Minimum Instruction Time : 0**

**Correct Marks : 5 Wrong Marks : 1**

**Question Key Details :**

Key	Value
Comprehension	MCQ

From a well shuffled pack of 52 cards, three cards are drawn one by one. The probability that the three cards are Jack, Queen and King respectively?

1.  $\frac{11}{1105}$
2.  $\frac{8}{16575}$
3.  $\frac{27}{2197}$
4.  $\frac{27}{305}$

**Options :**

485584135605. 1  
485584135606. 2  
485584135607. 3  
485584135608. 4

**Question Number : 488 Question Id : 48558433903 Question Type : MCQ Option Shuffling : No Is Question Mandatory : No Calculator : None Response Time : N.A Think Time : N.A Minimum Instruction Time : 0**

**Correct Marks : 5 Wrong Marks : 1**

**Question Key Details :**

Key	Value
Comprehension	MCQ

Two unbiased coins are tossed. What is the probability of getting one head and one tail?

1.  $\frac{1}{2}$

2.  $\frac{1}{3}$

3.  $\frac{1}{4}$

4. 1

**Options :**

485584135609. 1

485584135610. 2

485584135611. 3

485584135612. 4

**Question Number : 489 Question Id : 48558433904 Question Type : MCQ Option Shuffling : No Is Question Mandatory : No Calculator : None Response Time : N.A Think Time : N.A Minimum Instruction Time : 0**

**Correct Marks : 5 Wrong Marks : 1**

**Question Key Details :**

Key	Value
Comprehension	MCQ

If the manufacturer gains 10%, the wholesale dealer gains 15% and the retailer gains 25%, then find the cost of production of a table, if the retail price of which is ₹1265?

1. ₹1000

2. ₹900

3. ₹800

4. ₹700

**Options :**

485584135613. 1

485584135614. 2

485584135615. 3

485584135616. 4

**Question Number : 490 Question Id : 48558433905 Question Type : MCQ Option Shuffling : No Is Question Mandatory : No Calculator : None Response Time : N.A Think Time : N.A Minimum Instruction Time : 0**

**Correct Marks : 5 Wrong Marks : 1**

**Question Key Details :**

Key	Value
Comprehension	MCQ

In what ratio must a shopkeeper mix peas and soyabean of ₹16 and ₹25 per kg respectively, so as to obtain a mixture of ₹19 per kg?

1. 2 : 1

2. 7 : 5

3. 11 : 7

4. 13 : 8

**Options :**

485584135617. 1

485584135618. 2

485584135619. 3

485584135620. 4

**Question Number : 491 Question Id : 48558433906 Question Type : MCQ Option Shuffling : No Is Question Mandatory : No Calculator : None Response Time : N.A Think Time : N.A Minimum Instruction Time : 0**

**Correct Marks : 5 Wrong Marks : 1**

**Question Key Details :**

Key	Value
Comprehension	MCQ

Find the missing term.

1, 4, 27, 16, ?, 36, 343

1. 25

2. 87

3. 120

4. 125

**Options :**

485584135621. 1

485584135622. 2

485584135623. 3

485584135624. 4

**Question Number : 492 Question Id : 48558433907 Question Type : MCQ Option Shuffling : No Is Question Mandatory : No Calculator : None Response Time : N.A Think Time : N.A Minimum Instruction Time : 0**

**Correct Marks : 5 Wrong Marks : 1**

**Question Key Details :**

Key	Value
Comprehension	MCQ

From the given statements, what conclusion can be made?

**Statements :** Some men are wise  
All wise are professors

**Conclusion I :** Some men are professors.  
**II :** All professors are wise

1. Only I follows
2. Only II follows
3. I and II follows
4. Either I or II follows

**Options :**

- 485584135625. 1
- 485584135626. 2
- 485584135627. 3
- 485584135628. 4

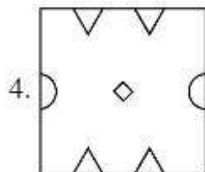
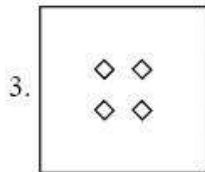
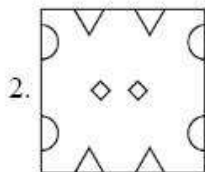
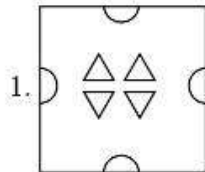
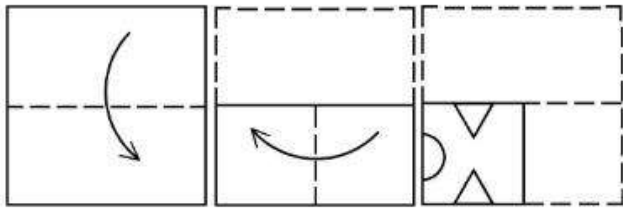
**Question Number : 493 Question Id : 48558433908 Question Type : MCQ Option Shuffling : No Is Question Mandatory : No Calculator : None Response Time : N.A Think Time : N.A Minimum Instruction Time : 0**

**Correct Marks : 5 Wrong Marks : 1**

**Question Key Details :**

Key	Value
Comprehension	MCQ

A piece of paper is folded and a cut is made as shown below. How it will appear when opened?



**Options :**

- 485584135629. 1
- 485584135630. 2
- 485584135631. 3
- 485584135632. 4

**Question Number : 494 Question Id : 48558433909 Question Type : MCQ Option Shuffling : No Is Question Mandatory : No Calculator : None Response Time : N.A Think Time : N.A Minimum Instruction Time : 0**

**Correct Marks : 5 Wrong Marks : 1**

**Question Key Details :**

Key	Value
Comprehension	MCQ



Manish goes 8 km in the North from his school. Now, turning to the left, he goes 15 km and again turns to the left and goes to 8 km. How far he is from his school and in which direction?

1. 15 km, South from school
2. 8 km, North from school
3. 8 km, West from school
4. 15 km, West from school

**Options :**

485584135633. 1  
485584135634. 2  
485584135635. 3  
485584135636. 4

**Question Number : 495 Question Id : 48558433910 Question Type : MCQ Option Shuffling : No Is Question Mandatory : No Calculator : None Response Time : N.A Think Time : N.A Minimum Instruction Time : 0**

**Correct Marks : 5 Wrong Marks : 1**

**Question Key Details :**

Key	Value
Comprehension	MCQ

Among P, Q, R, S, T, each having different weight, R is heavier than only P and S is lighter than Q and heavier than T. Who among them is the heaviest?

1. P
2. Q
3. S
4. T

**Options :**

485584135637. 1  
485584135638. 2  
485584135639. 3  
485584135640. 4

**Question Number : 496 Question Id : 48558433911 Question Type : MCQ Option Shuffling : No Is Question Mandatory : No Calculator : None Response Time : N.A Think Time : N.A Minimum Instruction Time : 0**

**Correct Marks : 5 Wrong Marks : 1**

**Question Key Details :**

Key	Value
Comprehension	MCQ

First two words are related in a certain way in:

Transition : Change :: Immobility : ?

Identify the suitable word in place of ? so that third and fourth words also become relatable the some manner.

1. Stillness
2. Liveliness
3. Action
4. Busyness

**Options :**

485584135641. 1

485584135642. 2

485584135643. 3

485584135644. 4

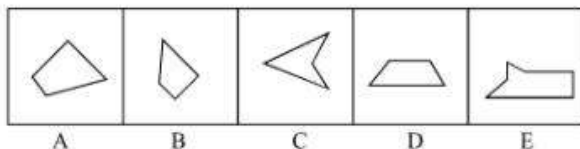
**Question Number : 497 Question Id : 48558433912 Question Type : MCQ Option Shuffling : No Is Question Mandatory : No Calculator : None Response Time : N.A Think Time : N.A Minimum Instruction Time : 0**

**Correct Marks : 5 Wrong Marks : 1**

**Question Key Details :**

Key	Value
Comprehension	MCQ

Which three of the given can be added to get a rectangular figure?



1. A, B, C
2. B, C, E
3. B, D, E
4. A, D, E

**Options :**

485584135645. 1

485584135646. 2

485584135647. 3

485584135648. 4

**Question Number : 498 Question Id : 48558433913 Question Type : MCQ Option Shuffling : No Is Question Mandatory : No Calculator : None Response Time : N.A Think Time : N.A Minimum Instruction Time : 0**

**Correct Marks : 5 Wrong Marks : 1**

**Question Key Details :**

Key	Value
-----	-------

January 11, 1997 was a Sunday. What day of the week was on January 7, 2000?

1. Sunday
2. Monday
3. Saturday
4. Tuesday

**Options :**

485584135649. 1  
485584135650. 2  
485584135651. 3  
485584135652. 4


**Question Number : 499 Question Id : 48558433914 Question Type : MCQ Option Shuffling : No Is Question Mandatory : No Calculator : None Response Time : N.A Think Time : N.A Minimum Instruction Time : 0**

**Correct Marks : 5 Wrong Marks : 1**

**Question Key Details :**

Key	Value
Comprehension	MCQ

Choose the correct mirror image of the following:



1                      2                      3                      4

1. 1
2. 2
3. 3
4. 4

**Options :**

485584135653. 1  
485584135654. 2  
485584135655. 3  
485584135656. 4

**Question Number : 500 Question Id : 48558433915 Question Type : MCQ Option Shuffling : No Is Question Mandatory : No Calculator : None Response Time : N.A Think Time : N.A Minimum Instruction Time : 0**

Correct Marks : 5 Wrong Marks : 1

Question Key Details :

Key	Value
Comprehension	MCQ

Choose odd one out from the following:

1. Copper
2. Iron
3. Aluminium
4. Bromine

Options :

485584135657. 1  
485584135658. 2  
485584135659. 3  
485584135660. 4

Question Number : 501 Question Id : 48558433916 Question Type : MCQ Option Shuffling : No Is Question Mandatory : No Calculator : None Response Time : N.A Think Time : N.A Minimum Instruction Time : 0

Correct Marks : 5 Wrong Marks : 1

Question Key Details :

Key	Value
Comprehension	MCQ

Study the following sequence and then answer the question given below:

9 H 7 Z A 9 2 B C H 3 1 X W V 5 T 4 M 6 0 Q 8 F J.

If every fourth letter/number in the above sequence starting from 7 is eliminated, which of the following will be fifth letter/number to the left of the 12th position from your right?

1. H
2. Z
3. A
4. C

Options :

485584135661. 1  
485584135662. 2  
485584135663. 3  
485584135664. 4

Question Number : 502 Question Id : 48558433917 Question Type : MCQ Option Shuffling : No Is Question Mandatory : No Calculator : None Response Time : N.A Think Time : N.A Minimum Instruction Time : 0

Correct Marks : 5 Wrong Marks : 1

Question Key Details :

Key	Value
-----	-------

Comprehension	MCQ
---------------	-----

If you are head of your office, some media people come to your office and request you brief them about the pension plan of your office, you will:

1. Ask the media people to come some other day
2. Immediately accept the offer and brief them
3. Get them turned out of your office
4. Ask them to wait and to consult the official concerned

**Options :**

- 485584135665. 1
- 485584135666. 2
- 485584135667. 3
- 485584135668. 4

**Question Number : 503 Question Id : 48558433918 Question Type : MCQ Option Shuffling : No Is Question Mandatory : No Calculator : None Response Time : N.A Think Time : N.A Minimum Instruction Time : 0**

**Correct Marks : 5 Wrong Marks : 1**

**Question Key Details :**

Key	Value
Comprehension	MCQ

In a certain code, COMPUTER is coded as ETUPMOCR. How is INACTIVE written in the same code?

1. VITCANIE
2. VICTNAII
3. VICTANIF
4. VITCANIG

**Options :**

- 485584135669. 1
- 485584135670. 2
- 485584135671. 3
- 485584135672. 4

**Question Number : 504 Question Id : 48558433919 Question Type : MCQ Option Shuffling : No Is Question Mandatory : No Calculator : None Response Time : N.A Think Time : N.A Minimum Instruction Time : 0**

**Correct Marks : 5 Wrong Marks : 1**

**Question Key Details :**

Key	Value
Comprehension	MCQ

Select the figure from amongst the four alternatives, which when place in the blank space would complete the pattern?

×		×		×	
	×		×		×
×		×		×	
#		#			
	#				
#		#			

1.

#	#	#
	#	

2.

	#	
#		#
	#	

3.

#		#
#		#

4.

	#	
	#	
	#	

**Options :**

- 485584135673. 1
- 485584135674. 2
- 485584135675. 3
- 485584135676. 4

**Question Number : 505 Question Id : 48558433920 Question Type : MCQ Option Shuffling : No Is Question Mandatory : No Calculator : None Response Time : N.A Think Time : N.A Minimum Instruction Time : 0**

**Correct Marks : 5 Wrong Marks : 1**

**Question Key Details :**

Key	Value
Comprehension	MCQ

Rajni ranked 9th from the top and 38th from the bottom in a class. How many students are there in the class?

- 1. 46
- 2. 47
- 3. 45
- 4. 44

**Options :**

- 485584135677. 1
- 485584135678. 2
- 485584135679. 3
- 485584135680. 4

**Question Number : 506 Question Id : 48558433921 Question Type : MCQ Option Shuffling : No Is Question Mandatory : No Calculator : None Response Time : N.A Think Time : N.A Minimum Instruction Time : 0**

**Correct Marks : 5 Wrong Marks : 1**

**Question Key Details :**

Key	Value
Comprehension	MCQ

The following two numbers are connected by some relationship:

82 : 9

Identify the suitable pair to which the same relationship is applicable.

- 1. 5 : 26
- 2. 6 : 37
- 3. 35 : 6
- 4. 26 : 5

**Options :**

- 485584135681. 1
- 485584135682. 2
- 485584135683. 3
- 485584135684. 4

**Question Number : 507 Question Id : 48558433922 Question Type : MCQ Option Shuffling : No Is Question Mandatory : No Calculator : None Response Time : N.A Think Time : N.A Minimum Instruction Time : 0**

**Correct Marks : 5 Wrong Marks : 1**

**Question Key Details :**

Key	Value
Comprehension	MCQ

P and Q are married couple. A and B are brothers. A is the brother of P. How is B related to Q?

1. Brother-in-law
2. Cousin
3. Son
4. Brother

**Options :**

- 485584135685. 1
- 485584135686. 2
- 485584135687. 3
- 485584135688. 4

**Question Number : 508 Question Id : 48558433923 Question Type : MCQ Option Shuffling : No Is Question Mandatory : No Calculator : None Response Time : N.A Think Time : N.A Minimum Instruction Time : 0**

**Correct Marks : 5 Wrong Marks : 1**

**Question Key Details :**

Key	Value
Comprehension	MCQ

Below mentioned question consists of a statement followed by two arguments I and II.

**Statement :** Should 'education' be brought under the control of the Central Government like defence?

**Argument I :** No. Education is a state subject and it should remain with state.

**II :** Yes. This is the only way to establish uniformity in a growth of education across the states.

1. Only argument I is strong
2. Only argument II is strong.
3. Either I or II is strong
4. Neither I nor II is strong

**Options :**

- 485584135689. 1
- 485584135690. 2
- 485584135691. 3
- 485584135692. 4

**Question Number : 509 Question Id : 48558433924 Question Type : MCQ Option Shuffling : No Is Question Mandatory : No Calculator : None Response Time : N.A Think Time : N.A Minimum Instruction Time : 0**

**Correct Marks : 5 Wrong Marks : 1**

**Question Key Details :**

Key	Value
Comprehension	MCQ



Choose the correct option on the basis of the following statements and conclusions.

**Statement :** Morning walks are good for health.

**Conclusion I :** All healthy people go for morning walks.

**II :** Evening walks are harmful.

1. Only conclusion I follow
2. Only conclusion II follow
3. Both I and II follow
4. Neither I nor II follow

**Options :**

485584135693. 1

485584135694. 2

485584135695. 3

485584135696. 4

**Question Number : 510 Question Id : 48558433925 Question Type : MCQ Option Shuffling : No Is Question Mandatory : No Calculator : None Response Time : N.A Think Time : N.A Minimum Instruction Time : 0**

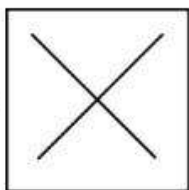
**Correct Marks : 5 Wrong Marks : 1**

**Question Key Details :**

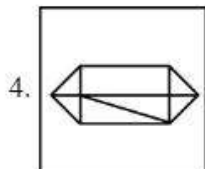
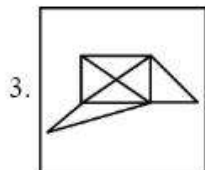
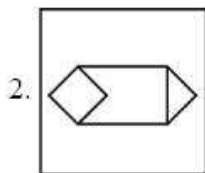
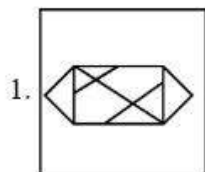
Key	Value
Comprehension	MCQ

In which option problem figure is embedded :

Problem Figure :



Answer Figure:



**Options :**

- 485584135697. 1
- 485584135698. 2
- 485584135699. 3
- 485584135700. 4

**Question Number : 511 Question Id : 48558433926 Question Type : MCQ Option Shuffling : No Is Question Mandatory : No Calculator : None Response Time : N.A Think Time : N.A Minimum Instruction Time : 0**

**Correct Marks : 5 Wrong Marks : 1**

**Question Key Details :**

Key	Value
Comprehension	MCQ

Which city does not have Jantar Mantar observatories built by Jai Singh II in the early 18th century?

1. Jaipur
2. New Delhi
3. Agra
4. Ujjain

**Options :**

485584135701. 1  
485584135702. 2  
485584135703. 3  
485584135704. 4

**Question Number : 512 Question Id : 48558433927 Question Type : MCQ Option Shuffling : No Is Question Mandatory : No Calculator : None Response Time : N.A Think Time : N.A Minimum Instruction Time : 0**

**Correct Marks : 5 Wrong Marks : 1**

**Question Key Details :**

Key	Value
Comprehension	MCQ

Who founded the Pala empire?

1. Dharpala
2. Gopala
3. Jayadeva
4. Senpala

**Options :**

485584135705. 1  
485584135706. 2  
485584135707. 3  
485584135708. 4

**Question Number : 513 Question Id : 48558433928 Question Type : MCQ Option Shuffling : No Is Question Mandatory : No Calculator : None Response Time : N.A Think Time : N.A Minimum Instruction Time : 0**

**Correct Marks : 5 Wrong Marks : 1**

**Question Key Details :**

Key	Value
Comprehension	MCQ

Alai Darwaja was built by:

1. Muhammad - bin - Tughlaq
2. Ala-ud-din Khilji
3. Amir Khusro
4. Iltilthmish

**Options :**

485584135709. 1  
485584135710. 2  
485584135711. 3  
485584135712. 4

**Question Number : 514 Question Id : 48558433929 Question Type : MCQ Option Shuffling : No Is Question Mandatory : No Calculator : None Response Time : N.A Think Time : N.A Minimum Instruction Time : 0**

**Correct Marks : 5 Wrong Marks : 1**

**Question Key Details :**

Key	Value
Comprehension	MCQ

Who found 'Ramakrishna Mission'?

1. Mahatma Gandhi
2. B.R. Ambedkar
3. Swami Vivekananda
4. Swami Dayanand Saraswati

**Options :**

485584135713. 1  
485584135714. 2  
485584135715. 3  
485584135716. 4

**Question Number : 515 Question Id : 48558433930 Question Type : MCQ Option Shuffling : No Is Question Mandatory : No Calculator : None Response Time : N.A Think Time : N.A Minimum Instruction Time : 0**

**Correct Marks : 5 Wrong Marks : 1**

**Question Key Details :**

Key	Value
Comprehension	MCQ

One light year is equals to \_\_\_\_\_.

1.  $9.46 \times 10^{12}$  km
2.  $1.12 \times 10^{10}$  km
3.  $9.00 \times 10^8$  km
4.  $9.42 \times 10^9$  km

**Options :**

485584135717. 1  
485584135718. 2  
485584135719. 3  
485584135720. 4

**Question Number : 516 Question Id : 48558433931 Question Type : MCQ Option Shuffling : No Is Question Mandatory : No Calculator : None Response Time : N.A Think Time : N.A Minimum Instruction Time : 0**

**Correct Marks : 5 Wrong Marks : 1**

**Question Key Details :**

Key	Value
Comprehension	MCQ

What is scientific name of 'Horse'?

1. Felis catus
2. Capra hercus
3. Eqqus caballus
4. Nija naja

**Options :**

485584135721. 1  
485584135722. 2  
485584135723. 3  
485584135724. 4

**Question Number : 517 Question Id : 48558433932 Question Type : MCQ Option Shuffling : No Is Question Mandatory : No Calculator : None Response Time : N.A Think Time : N.A Minimum Instruction Time : 0**

**Correct Marks : 5 Wrong Marks : 1**

**Question Key Details :**

Key	Value
Comprehension	MCQ

The change of gaseous state directly to solid state without going through liquid state is called \_\_\_\_\_.

1. Soildification
2. Sublimation
3. Deposition
4. Evaporation

**Options :**

485584135725. 1  
485584135726. 2  
485584135727. 3  
485584135728. 4

**Question Number : 518 Question Id : 48558433933 Question Type : MCQ Option Shuffling : No Is Question Mandatory : No Calculator : None Response Time : N.A Think Time : N.A Minimum Instruction Time : 0**

**Correct Marks : 5 Wrong Marks : 1**

**Question Key Details :**

Key	Value
Comprehension	MCQ

Who among the following in Ancient India made some prominent discoveries in Physics?

1. Sushruta
2. Charaka
3. Kanada
4. Nagarjuna

**Options :**

485584135729. 1  
485584135730. 2  
485584135731. 3  
485584135732. 4

**Question Number : 519 Question Id : 48558433934 Question Type : MCQ Option Shuffling : No Is Question Mandatory : No Calculator : None Response Time : N.A Think Time : N.A Minimum Instruction Time : 0**

**Correct Marks : 5 Wrong Marks : 1**

**Question Key Details :**

Key	Value
Comprehension	MCQ

Honourable Prime Minister of India has led the foundation for manufacturing plant of C-295 Aircraft at \_\_\_\_\_.

1. Gandhi Nagar
2. Rajkot
3. Surat
4. Vadodara

**Options :**

485584135733. 1  
485584135734. 2  
485584135735. 3  
485584135736. 4

**Question Number : 520 Question Id : 48558433935 Question Type : MCQ Option Shuffling : No Is Question Mandatory : No Calculator : None Response Time : N.A Think Time : N.A Minimum Instruction Time : 0**

**Correct Marks : 5 Wrong Marks : 1**

**Question Key Details :**

Key	Value
Comprehension	MCQ

In 2022, National conference on e-governance was held in \_\_\_\_\_.

1. Mumbai
2. Goa
3. New Delhi
4. Kolkata

**Options :**

485584135737. 1  
485584135738. 2  
485584135739. 3  
485584135740. 4

**Question Number : 521 Question Id : 48558433936 Question Type : MCQ Option Shuffling : No Is Question Mandatory : No Calculator : None Response Time : N.A Think Time : N.A Minimum Instruction Time : 0**

**Correct Marks : 5 Wrong Marks : 1**

**Question Key Details :**

Key	Value
Comprehension	MCQ

Naftali Bennett was sworn in as Israel's new Prime Minister on:

1. June 13, 2021
2. May 10, 2021
3. April 20, 2021
4. February, 2021

**Options :**

485584135741. 1  
485584135742. 2  
485584135743. 3  
485584135744. 4

**Question Number : 522 Question Id : 48558433937 Question Type : MCQ Option Shuffling : No Is Question Mandatory : No Calculator : None Response Time : N.A Think Time : N.A Minimum Instruction Time : 0**

**Correct Marks : 5 Wrong Marks : 1**

**Question Key Details :**

Key	Value
Comprehension	MCQ

Which of the following country become 11<sup>th</sup> member of ASEAN?

1. Vietnam
2. East Timor
3. Philippines
4. Laos

**Options :**

485584135745. 1  
485584135746. 2  
485584135747. 3  
485584135748. 4

**Question Number : 523 Question Id : 48558433938 Question Type : MCQ Option Shuffling : No Is Question Mandatory : No Calculator : None Response Time : N.A Think Time : N.A Minimum Instruction Time : 0**

**Correct Marks : 5 Wrong Marks : 1**

**Question Key Details :**

Key	Value
Comprehension	MCQ



Which of the following cities is known as the 'Cashew Capital of the World'?

1. Kozhikode
2. Kurnool
3. Kumbakonam
4. Kollam

**Options :**

485584135749. 1  
485584135750. 2  
485584135751. 3  
485584135752. 4

**Question Number : 524 Question Id : 48558433939 Question Type : MCQ Option Shuffling : No Is Question Mandatory : No Calculator : None Response Time : N.A Think Time : N.A Minimum Instruction Time : 0**

**Correct Marks : 5 Wrong Marks : 1**

**Question Key Details :**

Key	Value
Comprehension	MCQ

Laterite soil is formed due to intense leaching. Red laterite soil in Kerala is more suitable for:

1. Wheat
2. Paddy
3. Cashew nut
4. Cotton

**Options :**

485584135753. 1  
485584135754. 2  
485584135755. 3  
485584135756. 4

**Question Number : 525 Question Id : 48558433940 Question Type : MCQ Option Shuffling : No Is Question Mandatory : No Calculator : None Response Time : N.A Think Time : N.A Minimum Instruction Time : 0**

**Correct Marks : 5 Wrong Marks : 1**

**Question Key Details :**

Key	Value
Comprehension	MCQ

Smallest planet of solar system is?

1. Venus
2. Mercury
3. Uranus
4. Neptune

**Options :**

485584135757. 1  
485584135758. 2  
485584135759. 3  
485584135760. 4

**Question Number : 526 Question Id : 48558433941 Question Type : MCQ Option Shuffling : No Is Question Mandatory : No Calculator : None Response Time : N.A Think Time : N.A Minimum Instruction Time : 0**

**Correct Marks : 5 Wrong Marks : 1**

**Question Key Details :**

Key	Value
Comprehension	MCQ

The number of seats for Lok Sabha from Himachal Pradesh is:

1. 4
2. 14
3. 24
4. 5

**Options :**

485584135761. 1  
485584135762. 2  
485584135763. 3  
485584135764. 4

**Question Number : 527 Question Id : 48558433942 Question Type : MCQ Option Shuffling : No Is Question Mandatory : No Calculator : None Response Time : N.A Think Time : N.A Minimum Instruction Time : 0**

**Correct Marks : 5 Wrong Marks : 1**

**Question Key Details :**

Key	Value
Comprehension	MCQ

Which of the following generates maximum employment in India?

1. Secondary section
2. Primary section
3. Railways
4. Tertiary section

**Options :**

485584135765. 1  
485584135766. 2  
485584135767. 3  
485584135768. 4

**Question Number : 528 Question Id : 48558433943 Question Type : MCQ Option Shuffling : No Is Question Mandatory : No Calculator : None Response Time : N.A Think Time : N.A Minimum Instruction Time : 0**

**Correct Marks : 5 Wrong Marks : 1**

**Question Key Details :**

Key	Value
Comprehension	MCQ

The book "Mind Master: Winning Lessons from a Champion's Life" is about whom amongst the following?

1. Viswanathan Anand
2. M.S. Dhoni
3. Virat Kohli
4. Sachin Tendulkar

**Options :**

485584135769. 1  
485584135770. 2  
485584135771. 3  
485584135772. 4

**Question Number : 529 Question Id : 48558433944 Question Type : MCQ Option Shuffling : No Is Question Mandatory : No Calculator : None Response Time : N.A Think Time : N.A Minimum Instruction Time : 0**

**Correct Marks : 5 Wrong Marks : 1**

**Question Key Details :**

Key	Value
Comprehension	MCQ

The place where ISRO organised 'Human Spaceflight Expo'?

1. Ahmedabad
2. Bengaluru
3. Thiruvananthapuram
4. Mumbai

**Options :**

485584135773. 1  
485584135774. 2  
485584135775. 3  
485584135776. 4

**Question Number : 530 Question Id : 48558433945 Question Type : MCQ Option Shuffling : No Is Question Mandatory : No Calculator : None Response Time : N.A Think Time : N.A Minimum Instruction Time : 0**

**Correct Marks : 5 Wrong Marks : 1**

**Question Key Details :**

Key	Value
Comprehension	MCQ

Who among the following used the term 'Green Revolution' for increasing agricultural production in India?

1. Norman Borlaug
2. M.S. Swaminathan
3. Raj Krishna
4. R.K.V. Rao

**Options :**

485584135777. 1  
485584135778. 2  
485584135779. 3  
485584135780. 4

## Urdu

<b>Group Number :</b>	14
<b>Group Id :</b>	485584752
<b>Group Maximum Duration :</b>	45
<b>Group Minimum Duration :</b>	45
<b>Show Attended Group? :</b>	No
<b>Edit Attended Group? :</b>	No
<b>Break time :</b>	0
<b>Group Marks :</b>	200
<b>Is this Group for Examiner? :</b>	No
<b>Examiner permission :</b>	Cant View
<b>Show Progress Bar? :</b>	No

## Urdu

<b>Section Id :</b>	485584870
<b>Section Number :</b>	1
<b>Section type :</b>	Online
<b>Mandatory or Optional :</b>	Mandatory
<b>Number of Questions :</b>	50
<b>Number of Questions to be attempted :</b>	40
<b>Section Marks :</b>	200
<b>Enable Mark as Answered Mark for Review and Clear Response :</b>	Yes
<b>Maximum Instruction Time :</b>	0
<b>Sub-Section Number :</b>	1
<b>Sub-Section Id :</b>	4855842449
<b>Question Shuffling Allowed :</b>	No
<b>Is Section Default? :</b>	null
<b>Sub-Section Number :</b>	2
<b>Sub-Section Id :</b>	4855842450
<b>Question Shuffling Allowed :</b>	Yes
<b>Is Section Default? :</b>	null
<b>Sub-Section Number :</b>	3
<b>Sub-Section Id :</b>	4855842451
<b>Question Shuffling Allowed :</b>	No
<b>Is Section Default? :</b>	null
<b>Sub-Section Number :</b>	4
<b>Sub-Section Id :</b>	4855842452
<b>Question Shuffling Allowed :</b>	No
<b>Is Section Default? :</b>	null
<b>Sub-Section Number :</b>	5
<b>Sub-Section Id :</b>	4855842453
<b>Question Shuffling Allowed :</b>	Yes
<b>Is Section Default? :</b>	null