

# National Testing Agency

**Question Paper Name :** 03 15062023  
**Subject Name :** 15Jun2023 Shift3 Subject Combination 1  
**Creation Date :** 2023-06-16 00:56:35  
**Duration :** 150  
**Total Marks :** 650  
**Display Marks:** Yes

## English

**Group Number :** 1  
**Group Id :** 212807612  
**Group Maximum Duration :** 45  
**Group Minimum Duration :** 45  
**Show Attended Group? :** No  
**Edit Attended Group? :** No  
**Break time :** 0  
**Group Marks :** 200  
**Is this Group for Examiner? :** No  
**Examiner permission :** Cant View  
**Show Progress Bar? :** No

## English

**Section Id :** 212807714  
**Section Number :** 1  
**Section type :** Online  
**Mandatory or Optional :** Mandatory  
**Number of Questions :** 50  
**Number of Questions to be attempted :** 40  
**Section Marks :** 200  
**Enable Mark as Answered Mark for Review and Clear Response :** Yes  
**Maximum Instruction Time :** 0  
**Sub-Section Number :** 1  
**Sub-Section Id :** 2128072050  
**Question Shuffling Allowed :** No  
**Is Section Default? :** null

**Question Number : 1 Question Id : 21280728001 Question Type : MCQ Option Shuffling : No Is Question Mandatory : No Calculator : None**  
**Response Time : N.A Think Time : N.A Minimum Instruction Time : 0**

**Correct Marks : 5 Wrong Marks : 1**

**Question Key Details :**

Key	Value
Comprehension	Comp1

**Read the following passage and answer the question that follows :**

Your body is almost two-thirds water, so staying hydrated is important. Teenagers should aim to drink six to eight glasses of water per day, according to the British Nutrition Foundation. That number increases for teens who engage in sports or are especially active. Other good sources of fluid include 100 percent fruit juice and low-fat milk. Sugary and caffeinated drinks should be limited or eliminated from the diet completely as they provide excess sugar and empty calories.

According to the Cleveland Clinic, teenagers need at least nine hours of sleep each night to function at their best during the day. It sounds easy enough, but with early school start times, late afternoon practices and hours of homework, getting enough sleep can be a challenge. Set a regular bedtime that allows for nine hours of sleep before you have to get up for school. You should also plan for at least an hour of “quiet time” prior to bedtime. The goal is for all electronics to be turned off for the night so that the brain and body relax. Quiet time may involve listening to soothing music or reading a book.

Sports persons need to stay hydrated. They should drink enough :

- (1) water and 100% fruit juices
- (2) water, milk, coffee
- (3) water, juices, tea and coffee
- (4) Sugary and caffeinated drinks as well as enough plain water

**Options :**

- 212807112001. 1
- 212807112002. 2
- 212807112003. 3
- 212807112004. 4

**Question Number : 2 Question Id : 21280728002 Question Type : MCQ Option Shuffling : No Is Question Mandatory : No Calculator : None Response Time : N.A Think Time : N.A Minimum Instruction Time : 0**

**Correct Marks : 5 Wrong Marks : 1**

**Question Key Details :**

Key	Value
Comprehension	Comp1

**Read the following passage and answer the question that follows :**

Your body is almost two-thirds water, so staying hydrated is important. Teenagers should aim to drink six to eight glasses of water per day, according to the British Nutrition Foundation. That number increases for teens who engage in sports or are especially active. Other good sources of fluid include 100 percent fruit juice and low-fat milk. Sugary and caffeinated drinks should be limited or eliminated from the diet completely as they provide excess sugar and empty calories.

According to the Cleveland Clinic, teenagers need at least nine hours of sleep each night to function at their best during the day. It sounds easy enough, but with early school start times, late afternoon practices and hours of homework, getting enough sleep can be a challenge. Set a regular bedtime that allows for nine hours of sleep before you have to get up for school. You should also plan for at least an hour of “quiet time” prior to bedtime. The goal is for all electronics to be turned off for the night so that the brain and body relax. Quiet time may involve listening to soothing music or reading a book.

Why can't teenagers get enough sleep ?

- (A) early start at school
- (B) lot of work at school
- (C) lot of homework everyday
- (D) busy with friends

Choose the **correct** answer from the options given below :

- (1) (A), (B), (C) and (D)
- (2) (A) and (C) only
- (3) (A), (C) and (D) only
- (4) (B), (C) and (D) only

**Options :**

- 212807112005. 1
- 212807112006. 2
- 212807112007. 3
- 212807112008. 4

**Question Number : 3 Question Id : 21280728003 Question Type : MCQ Option Shuffling : No Is Question Mandatory : No Calculator : None Response Time : N.A Think Time : N.A Minimum Instruction Time : 0**

**Correct Marks : 5 Wrong Marks : 1**

**Question Key Details :**

Key	Value
Comprehension	Compl

**Read the following passage and answer the question that follows :**

Your body is almost two-thirds water, so staying hydrated is important. Teenagers should aim to drink six to eight glasses of water per day, according to the British Nutrition Foundation. That number increases for teens who engage in sports or are especially active. Other good sources of fluid include 100 percent fruit juice and low-fat milk. Sugary and caffeinated drinks should be limited or eliminated from the diet completely as they provide excess sugar and empty calories.

According to the Cleveland Clinic, teenagers need at least nine hours of sleep each night to function at their best during the day. It sounds easy enough, but with early school start times, late afternoon practices and hours of homework, getting enough sleep can be a challenge. Set a regular bedtime that allows for nine hours of sleep before you have to get up for school. You should also plan for at least an hour of “quiet time” prior to bedtime. The goal is for all electronics to be turned off for the night so that the brain and body relax. Quiet time may involve listening to soothing music or reading a book.

Young people need to do the following in order to get a nine hour sleep :

- (A) switch off electronics before bedtime
- (B) switch off all electronics for the night
- (C) find quiet time before bedtime
- (D) find a quiet time & place to sleep

Choose the **correct** answer from the options given below :

- (1) (B) and (C) only
- (2) (A), (B), (C) and (D)
- (3) (B), (C) and (D) only
- (4) (A), (B) and (C) only

**Options :**

- 212807112009. 1
- 212807112010. 2
- 212807112011. 3
- 212807112012. 4

**Question Number : 4 Question Id : 21280728004 Question Type : MCQ Option Shuffling : No Is Question Mandatory : No Calculator : None Response Time : N.A Think Time : N.A Minimum Instruction Time : 0**

**Correct Marks : 5 Wrong Marks : 1**

**Question Key Details :**

Key	Value
Comprehension	Compl

**Read the following passage and answer the question that follows :**

Your body is almost two-thirds water, so staying hydrated is important. Teenagers should aim to drink six to eight glasses of water per day, according to the British Nutrition Foundation. That number increases for teens who engage in sports or are especially active. Other good sources of fluid include 100 percent fruit juice and low-fat milk. Sugary and caffeinated drinks should be limited or eliminated from the diet completely as they provide excess sugar and empty calories.

According to the Cleveland Clinic, teenagers need at least nine hours of sleep each night to function at their best during the day. It sounds easy enough, but with early school start times, late afternoon practices and hours of homework, getting enough sleep can be a challenge. Set a regular bedtime that allows for nine hours of sleep before you have to get up for school. You should also plan for at least an hour of “quiet time” prior to bedtime. The goal is for all electronics to be turned off for the night so that the brain and body relax. Quiet time may involve listening to soothing music or reading a book.

Choose the heading that best explains the two sections in the text given :

- (A) Watch your beverage intake
- (B) Eat right, sleep tight
- (C) If you don't snooze, you lose
- (D) Making time for friends

Choose the **correct** answer from the options given below :

- (1) (A) and (C) only
- (2) (A) and (B) only
- (3) (B) and (C) only
- (4) (B) and (D) only

**Options :**

- 212807112013. 1
- 212807112014. 2
- 212807112015. 3
- 212807112016. 4

**Question Number : 5 Question Id : 21280728005 Question Type : MCQ Option Shuffling : No Is Question Mandatory : No Calculator : None Response Time : N.A Think Time : N.A Minimum Instruction Time : 0**

**Correct Marks : 5 Wrong Marks : 1**

**Question Key Details :**

Key	Value
Comprehension	Compl

**Read the following passage and answer the question that follows :**

Your body is almost two-thirds water, so staying hydrated is important. Teenagers should aim to drink six to eight glasses of water per day, according to the British Nutrition Foundation. That number increases for teens who engage in sports or are especially active. Other good sources of fluid include 100 percent fruit juice and low-fat milk. Sugary and caffeinated drinks should be limited or eliminated from the diet completely as they provide excess sugar and empty calories.

According to the Cleveland Clinic, teenagers need at least nine hours of sleep each night to function at their best during the day. It sounds easy enough, but with early school start times, late afternoon practices and hours of homework, getting enough sleep can be a challenge. Set a regular bedtime that allows for nine hours of sleep before you have to get up for school. You should also plan for at least an hour of "quiet time" prior to bedtime. The goal is for all electronics to be turned off for the night so that the brain and body relax. Quiet time may involve listening to soothing music or reading a book.

Match List - I with List - II.

**List - I**

- (A) Modal
- (B) Adjective
- (C) Adverb
- (D) Passive voice

**List - II**

- (I) to be eliminated completely
- (II) should be eliminated
- (III) sugary, caffeinated drinks
- (IV) electronics to be turned off

Choose the **correct** answer from the options given below :

- (1) (A)-(I), (B)-(III), (C)-(II), (D)-(IV)
- (2) (A)-(II), (B)-(III), (C)-(I), (D)-(IV)
- (3) (A)-(II), (B)-(I), (C)-(IV), (D)-(III)
- (4) (A)-(I), (B)-(II), (V)-(IV), (D)-(III)

**Options :**

- 212807112017. 1
- 212807112018. 2
- 212807112019. 3
- 212807112020. 4

**Sub-Section Number :** 2  
**Sub-Section Id :** 2128072051  
**Question Shuffling Allowed :** No  
**Is Section Default? :** null

**Question Number : 6 Question Id : 21280728006 Question Type : MCQ Option Shuffling : No Is Question Mandatory : No Calculator : None Response Time : N.A Think Time : N.A Minimum Instruction Time : 0 Correct Marks : 5 Wrong Marks : 1**

**Question Key Details :**

Key	Value
Comprehension	Comp2

**Read the following passage and answer the question that follows :**

Conducting an interview should be like painting by numbers if you are properly prepared. Consider the various aspects of the interview that benefit from early preparation. Some of these may seem obvious, but if left until the candidates are at the door, they can have a negative effect on the process. A checklist will help to make sure everything is planned and some of the less obvious considerations remembered.

Frequently overlooked is the choice of venue and its layout; this can affect the atmosphere of the interview and how candidates respond. The room can feel forbidding, formal, relaxed or cosy, depending on how the furniture is arranged and how the interviewers behave towards the candidates.

Interviewing can be stressful for candidates and interviewers alike, so take account of this in the timing of the interviews and briefing of the interviewers. Stress levels also influence how interviewers behave towards the candidates; developing skills in how to question and supply information to candidates will smooth the flow and help interviewers improve their performance. Of course, question technique, active listening and observation skills benefit managers in other areas of their work, too. The way in which the interview is ended also has an effect on the candidates and may well effect whether the desired candidate decides whether to accept the offer of employment or reject it.

Who is the intended audience of the passage ?

- (1) Job applicants
- (2) Students
- (3) Teachers
- (4) Interviewers

**Options :**

- 212807112021. 1
- 212807112022. 2
- 212807112023. 3
- 212807112024. 4

**Question Number : 7 Question Id : 21280728007 Question Type : MCQ Option Shuffling : No Is Question Mandatory : No Calculator : None Response Time : N.A Think Time : N.A Minimum Instruction Time : 0**

**Correct Marks : 5 Wrong Marks : 1**

**Question Key Details :**

Key	Value
Comprehension	Comp2

**Read the following passage and answer the question that follows :**

Conducting an interview should be like painting by numbers if you are properly prepared. Consider the various aspects of the interview that benefit from early preparation. Some of these may seem obvious, but if left until the candidates are at the door, they can have a negative effect on the process. A checklist will help to make sure everything is planned and some of the less obvious considerations remembered.

Frequently overlooked is the choice of venue and its layout; this can affect the atmosphere of the interview and how candidates respond. The room can feel forbidding, formal, relaxed or cosy, depending on how the furniture is arranged and how the interviewers behave towards the candidates.

Interviewing can be stressful for candidates and interviewers alike, so take account of this in the timing of the interviews and briefing of the interviewers. Stress levels also influence how interviewers behave towards the candidates; developing skills in how to question and supply information to candidates will smooth the flow and help interviewers improve their performance. Of course, question technique, active listening and observation skills benefit managers in other areas of their work, too. The way in which the interview is ended also has an effect on the candidates and may well effect whether the desired candidate decides whether to accept the offer of employment or reject it.

According to the passage, which of the following DOES NOT help in reducing stress during an interview ?

- (1) The behaviour of the interviewer
- (2) Timing of the interview
- (3) The ability of the interviewer to intimidate the candidate
- (4) The ability of the interviewer to convey information to the candidate

**Options :**

- 212807112025. 1
- 212807112026. 2
- 212807112027. 3
- 212807112028. 4

**Question Number : 8 Question Id : 21280728008 Question Type : MCQ Option Shuffling : No Is Question Mandatory : No Calculator : None Response Time : N.A Think Time : N.A Minimum Instruction Time : 0**

**Correct Marks : 5 Wrong Marks : 1**

**Question Key Details :**

Key	Value
Comprehension	Comp2



**Read the following passage and answer the question that follows :**

Conducting an interview should be like painting by numbers if you are properly prepared. Consider the various aspects of the interview that benefit from early preparation. Some of these may seem obvious, but if left until the candidates are at the door, they can have a negative effect on the process. A checklist will help to make sure everything is planned and some of the less obvious considerations remembered.

Frequently overlooked is the choice of venue and its layout; this can affect the atmosphere of the interview and how candidates respond. The room can feel forbidding, formal, relaxed or cosy, depending on how the furniture is arranged and how the interviewers behave towards the candidates.

Interviewing can be stressful for candidates and interviewers alike, so take account of this in the timing of the interviews and briefing of the interviewers. Stress levels also influence how interviewers behave towards the candidates; developing skills in how to question and supply information to candidates will smooth the flow and help interviewers improve their performance. Of course, question technique, active listening and observation skills benefit managers in other areas of their work, too. The way in which the interview is ended also has an effect on the candidates and may well effect whether the desired candidate decides whether to accept the offer of employment or reject it.

Choose a word from the passage that is closest in meaning to the following word “Unwelcome”

- (1) formal
- (2) frequently
- (3) forbidding
- (4) venue

**Options :**

- 212807112029. 1
- 212807112030. 2
- 212807112031. 3
- 212807112032. 4

**Question Number : 9 Question Id : 21280728009 Question Type : MCQ Option Shuffling : No Is Question Mandatory : No Calculator : None Response Time : N.A Think Time : N.A Minimum Instruction Time : 0 Correct Marks : 5 Wrong Marks : 1**

**Question Key Details :**

Key	Value
Comprehension	Comp2

**Read the following passage and answer the question that follows :**

Conducting an interview should be like painting by numbers if you are properly prepared. Consider the various aspects of the interview that benefit from early preparation. Some of these may seem obvious, but if left until the candidates are at the door, they can have a negative effect on the process. A checklist will help to make sure everything is planned and some of the less obvious considerations remembered.

Frequently overlooked is the choice of venue and its layout; this can affect the atmosphere of the interview and how candidates respond. The room can feel forbidding, formal, relaxed or cosy, depending on how the furniture is arranged and how the interviewers behave towards the candidates.

Interviewing can be stressful for candidates and interviewers alike, so take account of this in the timing of the interviews and briefing of the interviewers. Stress levels also influence how interviewers behave towards the candidates; developing skills in how to question and supply information to candidates will smooth the flow and help interviewers improve their performance. Of course, question technique, active listening and observation skills benefit managers in other areas of their work, too. The way in which the interview is ended also has an effect on the candidates and may well effect whether the desired candidate decides whether to accept the offer of employment or reject it.

According to the passage which of the following details is often overlooked while conducting interview ?

- (1) Age of the candidate
- (2) Candidate's attire
- (3) Choice of venue
- (4) Dietary preference of the candidate

**Options :**

- 212807112033. 1
- 212807112034. 2
- 212807112035. 3
- 212807112036. 4

**Question Number : 10 Question Id : 21280728010 Question Type : MCQ Option Shuffling : No Is Question Mandatory : No Calculator : None Response Time : N.A Think Time : N.A Minimum Instruction Time : 0**

**Correct Marks : 5 Wrong Marks : 1**

**Question Key Details :**

Key	Value
Comprehension	Comp2

**Read the following passage and answer the question that follows :**

Conducting an interview should be like painting by numbers if you are properly prepared. Consider the various aspects of the interview that benefit from early preparation. Some of these may seem obvious, but if left until the candidates are at the door, they can have a negative effect on the process. A checklist will help to make sure everything is planned and some of the less obvious considerations remembered.

Frequently overlooked is the choice of venue and its layout; this can affect the atmosphere of the interview and how candidates respond. The room can feel forbidding, formal, relaxed or cosy, depending on how the furniture is arranged and how the interviewers behave towards the candidates.

Interviewing can be stressful for candidates and interviewers alike, so take account of this in the timing of the interviews and briefing of the interviewers. Stress levels also influence how interviewers behave towards the candidates; developing skills in how to question and supply information to candidates will smooth the flow and help interviewers improve their performance. Of course, question technique, active listening and observation skills benefit managers in other areas of their work, too. The way in which the interview is ended also has an effect on the candidates and may well effect whether the desired candidate decides whether to accept the offer of employment or reject it.

Which of the following could be a suitable title for the passage ?

- (1) How to conduct an Interview
- (2) How to give an Interview
- (3) An Introduction to Interviews
- (4) How to get a Job

**Options :**

- 212807112037. 1
- 212807112038. 2
- 212807112039. 3
- 212807112040. 4

**Sub-Section Number :** 3  
**Sub-Section Id :** 2128072052  
**Question Shuffling Allowed :** No  
**Is Section Default? :** null

**Question Number : 11 Question Id : 21280728011 Question Type : MCQ Option Shuffling : No Is Question Mandatory : No Calculator : None**  
**Response Time : N.A Think Time : N.A Minimum Instruction Time : 0**  
**Correct Marks : 5 Wrong Marks : 1**

**Question Key Details :**

Key	Value
Comprehension	Comp3

**Read the following passage and answer the question that follows :**

Learning the Queen's English is like scrubbing off the bright red varnish from your toe nails, the morning after a dance. It takes a long time and there is always a little bit left at the end, a stain of red along the growing edges to remind you of the good time you had. So, you can see that learning came slowly to me. On the other hand, I had plenty of time. I learned your language in an immigration detention centre, in Essex, in the southeastern part of the United Kingdom. Two years, they locked me in there. Time was all I had.

But why did I go to all the trouble ? It is because of what some of the older girls explained to me: to survive, you must look good or talk even better. The plain ones and the silent ones, it seems their paperwork in never in order. You say, they get repatriated. We say, *sent home early*.

*The Other Hand* is the story of a young woman who flees conflict in her home village in the oil-rich region of southern Nigeria. She makes her way to the UK as an illegal immigrant and is detained for a long period of time at an immigrant detention centre near London. When she finally gets out, she seeks out the only two people she knows in England, whom she met on a Nigerian beach during a life-changing event a few years before. Will she be able to find them, and if so will they help her ? And if not, will she survive in her newly adopted country as an immigrant ?

What is meant by 'Queen's English' in the text given :

- (A) Good, formal English
- (B) Fluent, vernacular English
- (C) English as spoken in the UK
- (D) Good formal American English

Choose the **correct** answer from the options given below :

- (1) (A), (B) and (C) only
- (2) (A), (B) and (D) only
- (3) (A) and (B) only
- (4) (A) and (C) only

**Options :**

- 212807112041. 1
- 212807112042. 2
- 212807112043. 3
- 212807112044. 4

**Question Number : 12 Question Id : 21280728012 Question Type : MCQ Option Shuffling : No Is Question Mandatory : No Calculator : None Response Time : N.A Think Time : N.A Minimum Instruction Time : 0 Correct Marks : 5 Wrong Marks : 1**

**Question Key Details :**

Key	Value
Comprehension	Comp3

Read the following passage and answer the question that follows :

Learning the Queen's English is like scrubbing off the bright red varnish from your toe nails, the morning after a dance. It takes a long time and there is always a little bit left at the end, a stain of red along the growing edges to remind you of the good time you had. So, you can see that learning came slowly to me. On the other hand, I had plenty of time. I learned your language in an immigration detention centre, in Essex, in the southeastern part of the United Kingdom. Two years, they locked me in there. Time was all I had.

But why did I go to all the trouble ? It is because of what some of the older girls explained to me: to survive, you must look good or talk even better. The plain ones and the silent ones, it seems their paperwork in never in order. You say, they get repatriated. We say, *sent home early*.

*The Other Hand* is the story of a young woman who flees conflict in her home village in the oil-rich region of southern Nigeria. She makes her way to the UK as an illegal immigrant and is detained for a long period of time at an immigrant detention centre near London. When she finally gets out, she seeks out the only two people she knows in England, whom she met on a Nigerian beach during a life-changing event a few years before. Will she be able to find them, and if so will they help her ? And if not, will she survive in her newly adopted country as an immigrant ?

'The Other Hand' is the story of Nigerian woman who :

- (A) lived in a village in Southern Nigeria
- (B) was detained in Southern Nigeria
- (C) learnt English While in detention
- (D) was an illegal immigrant in the UK

Choose the **correct** answer from the options given below :

- (1) (A), (B) and (C) only
- (2) (A), (C) and (D) only
- (3) (B) and (C) only
- (4) (A), (B) and (D) only

Options :

212807112045. 1

212807112046. 2

212807112047. 3

212807112048. 4

Question Number : 13 Question Id : 21280728013 Question Type : MCQ Option Shuffling : No Is Question Mandatory : No Calculator : None Response Time : N.A Think Time : N.A Minimum Instruction Time : 0

Correct Marks : 5 Wrong Marks : 1

Question Key Details :

Key	Value
Comprehension	Comp3

**Read the following passage and answer the question that follows :**

Learning the Queen's English is like scrubbing off the bright red varnish from your toe nails, the morning after a dance. It takes a long time and there is always a little bit left at the end, a stain of red along the growing edges to remind you of the good time you had. So, you can see that learning came slowly to me. On the other hand, I had plenty of time. I learned your language in an immigration detention centre, in Essex, in the southeastern part of the United Kingdom. Two years, they locked me in there. Time was all I had.

But why did I go to all the trouble ? It is because of what some of the older girls explained to me: to survive, you must look good or talk even better. The plain ones and the silent ones, it seems their paperwork in never in order. You say, they get repatriated. We say, *sent home early*.

*The Other Hand* is the story of a young woman who flees conflict in her home village in the oil-rich region of southern Nigeria. She makes her way to the UK as an illegal immigrant and is detained for a long period of time at an immigrant detention centre near London. When she finally gets out, she seeks out the only two people she knows in England, whom she met on a Nigerian beach during a life-changing event a few years before. Will she be able to find them, and if so will they help her ? And if not, will she survive in her newly adopted country as an immigrant ?

Match List - I with List - II.

**List - I**

- (A) oil rich region
- (B) immigration detention centre
- (C) speaking good English
- (D) inability to speak good English

**List - II**

- (I) to survive in the UK
- (II) Southern Nigeria
- (III) Southeastern part of the UK
- (IV) to get repatriated

Choose the **correct** answer from the options given below :

- (1) (A)-(II), (B)-(III), (C)-(IV), (D)-(I)
- (2) (A)-(II), (B)-(I), (C)-(IV), (D)-(III)
- (3) (A)-(I), (B)-(II), (C)-(III), (D)-(IV)
- (4) (A)-(II), (B)-(III), (C)-(I), (D)-(IV)

**Options :**

- 212807112049. 1
- 212807112050. 2
- 212807112051. 3
- 212807112052. 4

**Question Number : 14 Question Id : 21280728014 Question Type : MCQ Option Shuffling : No Is Question Mandatory : No Calculator : None Response Time : N.A Think Time : N.A Minimum Instruction Time : 0**

**Correct Marks : 5 Wrong Marks : 1**

**Question Key Details :**

Key	Value
Comprehension	Comp3

**Read the following passage and answer the question that follows :**

Learning the Queen's English is like scrubbing off the bright red varnish from your toe nails, the morning after a dance. It takes a long time and there is always a little bit left at the end, a stain of red along the growing edges to remind you of the good time you had. So, you can see that learning came slowly to me. On the other hand, I had plenty of time. I learned your language in an immigration detention centre, in Essex, in the southeastern part of the United Kingdom. Two years, they locked me in there. Time was all I had.

But why did I go to all the trouble ? It is because of what some of the older girls explained to me: to survive, you must look good or talk even better. The plain ones and the silent ones, it seems their paperwork in never in order. You say, they get repatriated. We say, *sent home early*.

*The Other Hand* is the story of a young woman who flees conflict in her home village in the oil-rich region of southern Nigeria. She makes her way to the UK as an illegal immigrant and is detained for a long period of time at an immigrant detention centre near London. When she finally gets out, she seeks out the only two people she knows in England, whom she met on a Nigerian beach during a life-changing event a few years before. Will she be able to find them, and if so will they help her ? And if not, will she survive in her newly adopted country as an immigrant ?

Learning Queen's English is described using a metaphor which is :

- (1) to learn to survive
- (2) a stain of red along the greasing edges
- (3) scrubbing off the bright red varnish from your toenails
- (4) learning comes slowly

**Options :**

- 212807112053. 1
- 212807112054. 2
- 212807112055. 3
- 212807112056. 4

**Question Number : 15 Question Id : 21280728015 Question Type : MCQ Option Shuffling : No Is Question Mandatory : No Calculator : None Response Time : N.A Think Time : N.A Minimum Instruction Time : 0**

**Correct Marks : 5 Wrong Marks : 1**

**Question Key Details :**

Key	Value
Comprehension	Comp3

**Read the following passage and answer the question that follows :**

Learning the Queen's English is like scrubbing off the bright red varnish from your toe nails, the morning after a dance. It takes a long time and there is always a little bit left at the end, a stain of red along the growing edges to remind you of the good time you had. So, you can see that learning came slowly to me. On the other hand, I had plenty of time. I learned your language in an immigration detention centre, in Essex, in the southeastern part of the United Kingdom. Two years, they locked me in there. Time was all I had.

But why did I go to all the trouble ? It is because of what some of the older girls explained to me: to survive, you must look good or talk even better. The plain ones and the silent ones, it seems their paperwork in never in order. You say, they get repatriated. We say, *sent home early*.

*The Other Hand* is the story of a young woman who flees conflict in her home village in the oil-rich region of southern Nigeria. She makes her way to the UK as an illegal immigrant and is detained for a long period of time at an immigrant detention centre near London. When she finally gets out, she seeks out the only two people she knows in England, whom she met on a Nigerian beach during a life-changing event a few years before. Will she be able to find them, and if so will they help her ? And if not, will she survive in her newly adopted country as an immigrant ?

What does the author suggest, would have happened if she hadn't learnt the Queen's English ?

- (1) She would have survived in England.
- (2) She would have been repatriated.
- (3) She would have stayed longer in detention.
- (4) She couldn't have gone back home easily.

**Options :**

- 212807112057. 1
- 212807112058. 2
- 212807112059. 3
- 212807112060. 4

**Sub-Section Number :** 4  
**Sub-Section Id :** 2128072053  
**Question Shuffling Allowed :** Yes  
**Is Section Default? :** null

**Question Number : 16 Question Id : 21280728016 Question Type : MCQ Option Shuffling : No Is Question Mandatory : No Calculator : None Response Time : N.A Think Time : N.A Minimum Instruction Time : 0 Correct Marks : 5 Wrong Marks : 1**

**Question Key Details :**

Key	Value
Comprehension	MCQ

Change the given sentence of active voice into passive voice. Select the appropriate option.

The Prime-minister was giving the speech.

- (1) The speech was given by the Prime-minister.
- (2) The speech was being given the Prime-minister.
- (3) The speech was been given by the Prime-minister.
- (4) The speech had been given by the Prime-minister.

**Options :**

- 212807112061. 1
- 212807112062. 2
- 212807112063. 3
- 212807112064. 4



Question Number : 17 Question Id : 21280728017 Question Type : MCQ Option Shuffling : No Is Question Mandatory : No Calculator : None Response Time : N.A Think Time : N.A Minimum Instruction Time : 0

Correct Marks : 5 Wrong Marks : 1

Question Key Details :

Key	Value
Comprehension	MCQ

Choose the **correct** question tag ?

- (1) He said that, didn't he ?
- (2) He said that, did he ?
- (3) She didn't do that, didn't she ?
- (4) They will come, will they ?

Options :

- 212807112065. 1
- 212807112066. 2
- 212807112067. 3
- 212807112068. 4

Question Number : 18 Question Id : 21280728018 Question Type : MCQ Option Shuffling : No Is Question Mandatory : No Calculator : None Response Time : N.A Think Time : N.A Minimum Instruction Time : 0

Correct Marks : 5 Wrong Marks : 1

Question Key Details :

Key	Value
Comprehension	MCQ

Choose the part of the following sentence that contains an error :

Ranjeeta does not usually prefer staying at cottages, but last winter she spent few days in one.

- (1) Ranjeeta does not usually
- (2) prefer staying at cottages
- (3) But last winters
- (4) She spent few days into one

Options :

- 212807112069. 1
- 212807112070. 2
- 212807112071. 3
- 212807112072. 4

Question Number : 19 Question Id : 21280728019 Question Type : MCQ Option Shuffling : No Is Question Mandatory : No Calculator : None Response Time : N.A Think Time : N.A Minimum Instruction Time : 0

Correct Marks : 5 Wrong Marks : 1

Question Key Details :

Key	Value
Comprehension	MCQ

Choose the part of the following sentence that contains an error :

The most important feature of our products are that they are all created by hand.

- (1) The most important feature
- (2) of our products are that
- (3) they are all
- (4) created by hand

Options :

- 212807112073. 1
- 212807112074. 2
- 212807112075. 3
- 212807112076. 4

Question Number : 20 Question Id : 21280728020 Question Type : MCQ Option Shuffling : No Is Question Mandatory : No Calculator : None  
Response Time : N.A Think Time : N.A Minimum Instruction Time : 0

Correct Marks : 5 Wrong Marks : 1

Question Key Details :

Key	Value
Comprehension	MCQ

Rearrange the jumbled phrases to form a meaningful sentence :

- (A) devastated the city
- (B) and flooded many homes
- (C) when the tornado
- (D) it was a beautiful day

Choose the **correct** answer from the options given below :

- (1) (C), (B), (A), (D)
- (2) (D), (C), (A), (B)
- (3) (D), (C), (B), (A)
- (4) (C), (A), (B), (D)

Options :

- 212807112077. 1
- 212807112078. 2
- 212807112079. 3
- 212807112080. 4

Question Number : 21 Question Id : 21280728021 Question Type : MCQ Option Shuffling : No Is Question Mandatory : No Calculator : None  
Response Time : N.A Think Time : N.A Minimum Instruction Time : 0

Correct Marks : 5 Wrong Marks : 1

Question Key Details :

Key	Value
Comprehension	MCQ

Rearrange the following parts of a sentence to make a meaningful sentence :

- (A) can lead to
- (B) a moment of fun
- (C) life long scar
- (D) and merriment
- (E) and repentance

Choose the **correct** answer from the options given below :

- (1) (B), (D), (E), (A), (C)
- (2) (B), (A), (C), (D), (E)
- (3) (C), (A), (B), (D), (E)
- (4) (B), (D), (A), (C), (E)

Options :

- 212807112081. 1
- 212807112082. 2
- 212807112083. 3
- 212807112084. 4

Question Number : 22 Question Id : 21280728022 Question Type : MCQ Option Shuffling : No Is Question Mandatory : No Calculator : None  
Response Time : N.A Think Time : N.A Minimum Instruction Time : 0

Correct Marks : 5 Wrong Marks : 1

Question Key Details :

Key	Value
-----	-------

From the given options, select the one which is opposite in meaning to the given word :

empathy

- (1) original
- (2) insensitivity
- (3) kindness
- (4) stubbornness

**Options :**

212807112085. 1  
212807112086. 2  
212807112087. 3  
212807112088. 4

**Question Number : 23 Question Id : 21280728023 Question Type : MCQ Option Shuffling : No Is Question Mandatory : No Calculator : None Response Time : N.A Think Time : N.A Minimum Instruction Time : 0**

**Correct Marks : 5 Wrong Marks : 1**

**Question Key Details :**

Key	Value
Comprehension	MCQ

Choose the appropriate word to fill in the blank :

It was a challenge to \_\_\_\_\_ a response from the prisoner.

- (1) illicit
- (2) licit
- (3) elicit
- (4) ellicit

**Options :**

212807112089. 1  
212807112090. 2  
212807112091. 3  
212807112092. 4

**Question Number : 24 Question Id : 21280728024 Question Type : MCQ Option Shuffling : No Is Question Mandatory : No Calculator : None Response Time : N.A Think Time : N.A Minimum Instruction Time : 0**

**Correct Marks : 5 Wrong Marks : 1**

**Question Key Details :**

Key	Value
Comprehension	MCQ

From the options given below, select the one closest in meaning to 'Agile' :

- (1) Needle
- (2) Nimble
- (3) Name sake
- (4) Weak

**Options :**

212807112093. 1  
212807112094. 2  
212807112095. 3  
212807112096. 4

**Question Number : 25 Question Id : 21280728025 Question Type : MCQ Option Shuffling : No Is Question Mandatory : No Calculator : None Response Time : N.A Think Time : N.A Minimum Instruction Time : 0**

**Correct Marks : 5 Wrong Marks : 1**

**Question Key Details :**

Key	Value
Comprehension	MCQ

Pick a word that means the same as 'readable' :

- (1) Legible
- (2) Washable
- (3) Praise worthy
- (4) Edible

**Options :**

212807112097. 1  
212807112098. 2  
212807112099. 3  
212807112100. 4

**Question Number : 26 Question Id : 21280728026 Question Type : MCQ Option Shuffling : No Is Question Mandatory : No Calculator : None Response Time : N.A Think Time : N.A Minimum Instruction Time : 0**

**Correct Marks : 5 Wrong Marks : 1**

**Question Key Details :**

Key	Value
Comprehension	MCQ

Fill in the blanks with appropriate Articles :

You are \_\_\_\_\_ gem of \_\_\_\_\_ person.

- (1) an, the
- (2) a, the
- (3) a, a
- (4) the, the

**Options :**

212807112101. 1  
212807112102. 2  
212807112103. 3  
212807112104. 4

**Question Number : 27 Question Id : 21280728027 Question Type : MCQ Option Shuffling : No Is Question Mandatory : No Calculator : None Response Time : N.A Think Time : N.A Minimum Instruction Time : 0**

**Correct Marks : 5 Wrong Marks : 1**

**Question Key Details :**

Key	Value
Comprehension	MCQ

Which of the following sentences uses an Article INCORRECTLY ?

- (1) They cannot be trusted even a bit.
- (2) What is a time of your arrival ?
- (3) He is a strange person.
- (4) There are no friends in the room.

**Options :**

212807112105. 1  
212807112106. 2  
212807112107. 3  
212807112108. 4

**Question Number : 28 Question Id : 21280728028 Question Type : MCQ Option Shuffling : No Is Question Mandatory : No Calculator : None Response Time : N.A Think Time : N.A Minimum Instruction Time : 0**

**Correct Marks : 5 Wrong Marks : 1**

**Question Key Details :**

Key	Value
Comprehension	MCQ

Match List - I with List - II.

**List - I**

- (A) Cortege
- (B) Elegy
- (C) Obituary
- (D) Epitaph

**List - II**

- (I) a poem of lamentation on the death of someone loved and admired.
- (II) A funeral procession comprising a number of mourning.
- (III) an account in the newspaper about the funeral of a deceased.
- (IV) words inscribed on the grave/tomb in the memory of the one buried.

Choose the **correct** answer from the options given below :

- (1) (A)-(II), (B)-(I), (C)-(III), (D)-(IV)
- (2) (A)-(I), (B)-(II), (C)-(III), (D)-(IV)
- (3) (A)-(IV), (B)-(III), (C)-(II), (D)-(I)
- (4) (A)-(II), (B)-(III), (C)-(I), (D)-(IV)

**Options :**

- 212807112109. 1
- 212807112110. 2
- 212807112111. 3
- 212807112112. 4

**Question Number : 29 Question Id : 21280728029 Question Type : MCQ Option Shuffling : No Is Question Mandatory : No Calculator : None Response Time : N.A Think Time : N.A Minimum Instruction Time : 0**

**Correct Marks : 5 Wrong Marks : 1**

**Question Key Details :**

Key	Value
Comprehension	MCQ

Choose the word that denotes one that is in a war - like mood :

- (1) Veteran
- (2) Virtuoso
- (3) Belligerent
- (4) Bohemian

**Options :**

- 212807112113. 1
- 212807112114. 2
- 212807112115. 3
- 212807112116. 4

**Question Number : 30 Question Id : 21280728030 Question Type : MCQ Option Shuffling : No Is Question Mandatory : No Calculator : None Response Time : N.A Think Time : N.A Minimum Instruction Time : 0**

**Correct Marks : 5 Wrong Marks : 1**

**Question Key Details :**

Key	Value
Comprehension	MCQ

Choose the sentence that has the **correct** preposition in it :

- (1) They will return with fifteen minutes.
- (2) The students came onto the classroom.
- (3) Susheel works on the office every weekend.
- (4) Radha will not be able to reach within half an hour.

**Options :**

- 212807112117. 1

212807112118. 2  
212807112119. 3  
212807112120. 4

**Question Number : 31 Question Id : 21280728031 Question Type : MCQ Option Shuffling : No Is Question Mandatory : No Calculator : None Response Time : N.A Think Time : N.A Minimum Instruction Time : 0**

**Correct Marks : 5 Wrong Marks : 1**

**Question Key Details :**

Key	Value
Comprehension	MCQ

Choose the sentence that has the **incorrect** preposition in it :

- (1) The train is running off time.
- (2) It has been five years since I have seen my mother.
- (3) Sheela left for the station an hour ago.
- (4) Vineet studied till 1am for his upcoming exam.

**Options :**

212807112121. 1  
212807112122. 2  
212807112123. 3  
212807112124. 4

**Question Number : 32 Question Id : 21280728032 Question Type : MCQ Option Shuffling : No Is Question Mandatory : No Calculator : None Response Time : N.A Think Time : N.A Minimum Instruction Time : 0**

**Correct Marks : 5 Wrong Marks : 1**

**Question Key Details :**

Key	Value
Comprehension	MCQ

Choose the appropriate option to fill in the blank in the given sentence :

\_\_\_\_\_ you please show me the way to station ?

- (A) could
- (B) will
- (C) should
- (D) can

Choose the **correct** answer from the options given below :

- (1) (A) and (D) Only
- (2) (B) Only
- (3) (C) Only
- (4) (A) Only

**Options :**

212807112125. 1  
212807112126. 2  
212807112127. 3  
212807112128. 4

**Question Number : 33 Question Id : 21280728033 Question Type : MCQ Option Shuffling : No Is Question Mandatory : No Calculator : None Response Time : N.A Think Time : N.A Minimum Instruction Time : 0**

**Correct Marks : 5 Wrong Marks : 1**

**Question Key Details :**

Key	Value
Comprehension	MCQ

Match List - I with List - II.

**List - I**

- (A) Ad interim
- (B) Carte blanche
- (C) De jure
- (D) Pot Pourri

**List - II**

- (I) Meanwhile
- (II) According to law
- (III) Mixture
- (IV) Full freedom of action

Choose the **correct** answer from the options given below :

- (1) (A)-(IV), (B)-(II), (C)-(III), (D)-(I)
- (2) (A)-(I), (B)-(II), (C)-(III), (D)-(IV)
- (3) (A)-(IV), (B)-(III), (C)-(II), (D)-(I)
- (4) (A)-(I), (B)-(IV), (C)-(II), (D)-(III)

**Options :**

- 212807112129. 1
- 212807112130. 2
- 212807112131. 3
- 212807112132. 4

**Question Number : 34 Question Id : 21280728034 Question Type : MCQ Option Shuffling : No Is Question Mandatory : No Calculator : None Response Time : N.A Think Time : N.A Minimum Instruction Time : 0**

**Correct Marks : 5 Wrong Marks : 1**

**Question Key Details :**

Key	Value
Comprehension	MCQ

Identify the **correct** ones :

- (A) go-went-gone
- (B) bring-brought-brought
- (C) mistake-mistook-mistook
- (D) steal-stole-stole
- (E) take-taken-taken

Choose the **correct** answer from the options given below :

- (1) (A), (B), (C) Only
- (2) (A), (B), (D) Only
- (3) (A), (B) Only
- (4) (A), (B), (C), (D) Only

**Options :**

- 212807112133. 1
- 212807112134. 2
- 212807112135. 3
- 212807112136. 4

**Question Number : 35 Question Id : 21280728035 Question Type : MCQ Option Shuffling : No Is Question Mandatory : No Calculator : None Response Time : N.A Think Time : N.A Minimum Instruction Time : 0**

**Correct Marks : 5 Wrong Marks : 1**

**Question Key Details :**

Key	Value
Comprehension	MCQ

Which of the following can be called **Gerund** :

- (A) Stop playing.
- (B) I love to go hunting.
- (C) Kids are sleeping.
- (D) Seeing is believing.
- (E) They are smoking outside.

Choose the **correct** answer from the options given below :

- (1) (A), (B), (C) Only
- (2) (A), (B), (D) Only
- (3) (B), (C), (D) Only
- (4) (A), (B), (C), (D) Only

**Options :**

- 212807112137. 1
- 212807112138. 2
- 212807112139. 3
- 212807112140. 4

**Question Number : 36 Question Id : 21280728036 Question Type : MCQ Option Shuffling : No Is Question Mandatory : No Calculator : None Response Time : N.A Think Time : N.A Minimum Instruction Time : 0**

**Correct Marks : 5 Wrong Marks : 1**

**Question Key Details :**

Key	Value
Comprehension	MCQ

Choose the part of the following sentence that contains an error :

If a company sends its employees abroad to work for a foreign client, they pays them a daily allowance.

- (1) If a company
- (2) Sends its employees abroad
- (3) To work for a foreign client, they
- (4) Pays them a daily allowance

**Options :**

- 212807112141. 1
- 212807112142. 2
- 212807112143. 3
- 212807112144. 4

**Question Number : 37 Question Id : 21280728037 Question Type : MCQ Option Shuffling : No Is Question Mandatory : No Calculator : None Response Time : N.A Think Time : N.A Minimum Instruction Time : 0**

**Correct Marks : 5 Wrong Marks : 1**

**Question Key Details :**

Key	Value
Comprehension	MCQ

Choose the part of the following sentence that contains an error :

It is the quarter to ten by my watch.

- (1) It is the
- (2) quarter to ten
- (3) by my watch
- (4) No error

**Options :**



212807112145. 1  
212807112146. 2  
212807112147. 3  
212807112148. 4

**Question Number : 38 Question Id : 21280728038 Question Type : MCQ Option Shuffling : No Is Question Mandatory : No Calculator : None Response Time : N.A Think Time : N.A Minimum Instruction Time : 0**

**Correct Marks : 5 Wrong Marks : 1**

**Question Key Details :**

Key	Value
Comprehension	MCQ

On the passing \_\_\_\_\_ of his grandfather, I sent him a bouquet of flowers and a condolence card.

- (1) Over
- (2) Into
- (3) By
- (4) Away

**Options :**

212807112149. 1  
212807112150. 2  
212807112151. 3  
212807112152. 4

**Question Number : 39 Question Id : 21280728039 Question Type : MCQ Option Shuffling : No Is Question Mandatory : No Calculator : None Response Time : N.A Think Time : N.A Minimum Instruction Time : 0**

**Correct Marks : 5 Wrong Marks : 1**

**Question Key Details :**

Key	Value
Comprehension	MCQ

Take your gloves \_\_\_\_\_ before shaking someone's hand.

- (1) On
- (2) In
- (3) Off
- (4) With

**Options :**

212807112153. 1  
212807112154. 2  
212807112155. 3  
212807112156. 4

**Question Number : 40 Question Id : 21280728040 Question Type : MCQ Option Shuffling : No Is Question Mandatory : No Calculator : None Response Time : N.A Think Time : N.A Minimum Instruction Time : 0**

**Correct Marks : 5 Wrong Marks : 1**

**Question Key Details :**

Key	Value
Comprehension	MCQ

Choose the **correct** homonym pair :

- (1) Career-Carrier
- (2) Birth-Berth
- (3) Confident-Confidant
- (4) Eligible-Illegible

**Options :**

212807112157. 1

212807112158. 2  
212807112159. 3  
212807112160. 4

**Question Number : 41 Question Id : 21280728041 Question Type : MCQ Option Shuffling : No Is Question Mandatory : No Calculator : None**  
**Response Time : N.A Think Time : N.A Minimum Instruction Time : 0**

**Correct Marks : 5 Wrong Marks : 1**

**Question Key Details :**

Key	Value
Comprehension	MCQ

Rearrange the following segments to make a meaningful sentence :

- (A) at the progress India has made in the field of nuclear research
- (B) the prime minister looked back with satisfaction
- (C) will have to accept India as a nuclear power
- (D) and asserted that sooner or later the big powers

Choose the **correct** answer from the options given below :

- (1) (B), (A), (D), (C)
- (2) (B), (D), (A), (C)
- (3) (B), (C), (D), (A)
- (4) (A), (B), (D), (C)

**Options :**

212807112161. 1  
212807112162. 2  
212807112163. 3  
212807112164. 4

**Question Number : 42 Question Id : 21280728042 Question Type : MCQ Option Shuffling : No Is Question Mandatory : No Calculator : None**  
**Response Time : N.A Think Time : N.A Minimum Instruction Time : 0**

**Correct Marks : 5 Wrong Marks : 1**

**Question Key Details :**

Key	Value
Comprehension	MCQ

From the given options, select the word that is opposite in meaning to 'Excruciating' :

- (1) Sophisticated
- (2) Modern
- (3) Noisy
- (4) Mild

**Options :**

212807112165. 1  
212807112166. 2  
212807112167. 3  
212807112168. 4

**Question Number : 43 Question Id : 21280728043 Question Type : MCQ Option Shuffling : No Is Question Mandatory : No Calculator : None**  
**Response Time : N.A Think Time : N.A Minimum Instruction Time : 0**

**Correct Marks : 5 Wrong Marks : 1**

**Question Key Details :**

Key	Value
Comprehension	MCQ

From the given options, select the word that means the opposite of 'dexterous' ?

- (1) Simple
- (2) Distant
- (3) Clumsy
- (4) Distant

Options :

- 212807112169. 1
- 212807112170. 2
- 212807112171. 3
- 212807112172. 4

Question Number : 44 Question Id : 21280728044 Question Type : MCQ Option Shuffling : No Is Question Mandatory : No Calculator : None Response Time : N.A Think Time : N.A Minimum Instruction Time : 0

Correct Marks : 5 Wrong Marks : 1

Question Key Details :

Key	Value
Comprehension	MCQ

Out of given options choose a word that can be used as an adjective as well as an adverb.

- (1) good
- (2) well
- (3) hand
- (4) hardly

Options :

- 212807112173. 1
- 212807112174. 2
- 212807112175. 3
- 212807112176. 4

Question Number : 45 Question Id : 21280728045 Question Type : MCQ Option Shuffling : No Is Question Mandatory : No Calculator : None Response Time : N.A Think Time : N.A Minimum Instruction Time : 0

Correct Marks : 5 Wrong Marks : 1

Question Key Details :

Key	Value
Comprehension	MCQ

Mark the sentences which have 'adverbs' ?

- (A) The machine works very well.
- (B) She is a skilful worker.
- (C) He seldom visits his parents.
- (D) He speaks really well.

Choose the **correct** answer from the options given below :

- (1) (B), (C), (D) Only
- (2) (A), (D), (D) Only
- (3) (C), (D) Only
- (4) (A), (D) Only

Options :

- 212807112177. 1
- 212807112178. 2
- 212807112179. 3
- 212807112180. 4

Question Number : 46 Question Id : 21280728046 Question Type : MCQ Option Shuffling : No Is Question Mandatory : No Calculator : None  
Response Time : N.A Think Time : N.A Minimum Instruction Time : 0

Correct Marks : 5 Wrong Marks : 1

Question Key Details :

Key	Value
Comprehension	MCQ

Choose the **correct** question tag for the following sentence :

You are a real piece of work, \_\_\_\_\_ ?

- (1) aren't you ?
- (2) isn't you ?
- (3) weren't you ?
- (4) are you ?

Options :

- 212807112181. 1
- 212807112182. 2
- 212807112183. 3
- 212807112184. 4

Question Number : 47 Question Id : 21280728047 Question Type : MCQ Option Shuffling : No Is Question Mandatory : No Calculator : None  
Response Time : N.A Think Time : N.A Minimum Instruction Time : 0

Correct Marks : 5 Wrong Marks : 1

Question Key Details :

Key	Value
Comprehension	MCQ

Choose the **incorrect** homonym pair :

- (1) Bale-Bail
- (2) Caste-Cast
- (3) Access-Excess
- (4) Ail-Ale

Options :

- 212807112185. 1
- 212807112186. 2
- 212807112187. 3
- 212807112188. 4

Question Number : 48 Question Id : 21280728048 Question Type : MCQ Option Shuffling : No Is Question Mandatory : No Calculator : None  
Response Time : N.A Think Time : N.A Minimum Instruction Time : 0

Correct Marks : 5 Wrong Marks : 1

Question Key Details :

Key	Value
Comprehension	MCQ

Match List - I with List - II.

**List - I**

- (A) apple of one's eye
- (B) to be all ears
- (C) out of the blue
- (D) hard of hearing

**List - II**

- (I) all of a sudden
- (II) not able to hear well
- (III) loved clearly
- (IV) to be very attentive

Choose the **correct** answer from the options given below :

- (1) (A)-(III), (B)-(II), (C)-(I), (D)-(IV)
- (2) (A)-(III), (B)-(II), (C)-(I), (D)-(IV)
- (3) (A)-(IV), (B)-(III), (C)-(I), (D)-(II)
- (4) (A)-(III), (B)-(II), (C)-(IV), (D)-(I)

**Options :**

- 212807112189. 1
- 212807112190. 2
- 212807112191. 3
- 212807112192. 4

Question Number : 49 Question Id : 21280728049 Question Type : MCQ Option Shuffling : No Is Question Mandatory : No Calculator : None Response Time : N.A Think Time : N.A Minimum Instruction Time : 0

Correct Marks : 5 Wrong Marks : 1

**Question Key Details :**

Key	Value
Comprehension	MCQ

From the given options, choose the one that rightly explains the following idiom :

**to call a spade a spade**

- (A) to speak rudely
- (B) to speak directly
- (C) to speak diplomatically
- (D) to speak frankly

Choose the **correct** answer from the options given below :

- (1) (B) Only
- (2) (B) and (D) Only
- (3) (B), (C), (D) Only
- (4) (A), B), (C) Only

**Options :**

- 212807112193. 1
- 212807112194. 2
- 212807112195. 3
- 212807112196. 4

Question Number : 50 Question Id : 21280728050 Question Type : MCQ Option Shuffling : No Is Question Mandatory : No Calculator : None Response Time : N.A Think Time : N.A Minimum Instruction Time : 0

Correct Marks : 5 Wrong Marks : 1

**Question Key Details :**

Key	Value
Comprehension	MCQ

Identify the sentences that have 'adjectival phrases' :

- (A) She dance skilfully.
- (B) She is a skilful dancer.
- (C) That was a thoughtful act.
- (D) He acted thoughtfully.

Choose the **correct** answer from the options given below :

- (1) (B), (C) Only
- (2) (A), (B), (C) Only
- (3) (B), (C), (D) Only
- (4) (A), (D) Only

**Options :**

- 212807112197. 1
- 212807112198. 2
- 212807112199. 3
- 212807112200. 4

### Psychology

Group Number :	2
Group Id :	212807613
Group Maximum Duration :	45
Group Minimum Duration :	45
Show Attended Group? :	No
Edit Attended Group? :	No
Break time :	0
Group Marks :	200
Is this Group for Examiner? :	No
Examiner permission :	Cant View
Show Progress Bar? :	No

### Psychology

Section Id :	212807715
Section Number :	1
Section type :	Online
Mandatory or Optional :	Mandatory
Number of Questions :	50
Number of Questions to be attempted :	40
Section Marks :	200
Enable Mark as Answered Mark for Review and Clear Response :	Yes
Maximum Instruction Time :	0
Sub-Section Number :	1
Sub-Section Id :	2128072054
Question Shuffling Allowed :	Yes
Is Section Default? :	null

Question Number : 51 Question Id : 21280728111 Question Type : MCQ Option Shuffling : No Is Question Mandatory : No Calculator : None  
Response Time : N.A Think Time : N.A Minimum Instruction Time : 0

Correct Marks : 5 Wrong Marks : 1

Question Key Details :

Key	Value
Comprehension	MCQ

Who defined intelligence as “the global and aggregate capacity of an individual to think rationally, act purposefully, and to deal effectively with his/her environment” ?

- (1) Thurstone
- (2) Wechsler
- (3) Spearman
- (4) Binet

**Options :**

- 212807112441. 1
- 212807112442. 2
- 212807112443. 3
- 212807112444. 4

**Question Number : 51 Question Id : 21280728111 Question Type : MCQ Option Shuffling : No Is Question Mandatory : No Calculator : None Response Time : N.A Think Time : N.A Minimum Instruction Time : 0**

**Correct Marks : 5 Wrong Marks : 1**

**Question Key Details :**

Key	Value
Comprehension	MCQ

बुद्धि को “व्यक्ति की तर्कसंगत सोचने, अर्थपूर्ण कार्य करने और अपने वातावरण के साथ प्रभावी रूप से समायोजन करने की वैश्विक और सयुक्त क्षमता” के रूप में परिभाषित किया है :

- (1) थर्स्टन
- (2) वैश्लर
- (3) स्पीयरमैन
- (4) बिने

**Options :**

- 212807112441. 1
- 212807112442. 2
- 212807112443. 3
- 212807112444. 4

**Question Number : 52 Question Id : 21280728112 Question Type : MCQ Option Shuffling : No Is Question Mandatory : No Calculator : None Response Time : N.A Think Time : N.A Minimum Instruction Time : 0**

**Correct Marks : 5 Wrong Marks : 1**

**Question Key Details :**

Key	Value
Comprehension	MCQ

If a person has the skill of understanding the motives, feelings and behaviour of other people, he/she is said to have :

- (1) Interpersonal intelligence
- (2) Intrapersonal intelligence
- (3) Linguistic intelligence
- (4) Social intelligence

**Options :**

- 212807112445. 1
- 212807112446. 2
- 212807112447. 3
- 212807112448. 4

**Question Number : 52 Question Id : 21280728112 Question Type : MCQ Option Shuffling : No Is Question Mandatory : No Calculator : None Response Time : N.A Think Time : N.A Minimum Instruction Time : 0**

**Correct Marks : 5 Wrong Marks : 1**

**Question Key Details :**

Key	Value
Comprehension	MCQ

यदि एक व्यक्ति के पास दूसरे व्यक्तियों के उद्देश्य भावनाओं और व्यवहार को समझने का कौशल है तो उसे कहते हैं :

- (1) अन्तर्व्यैक्तिक बुद्धि
- (2) अन्तराव्यैक्तिक बुद्धि
- (3) भाषायी बुद्धि
- (4) सामाजिक बुद्धि

**Options :**

212807112445. 1  
212807112446. 2  
212807112447. 3  
212807112448. 4

**Question Number : 53 Question Id : 21280728113 Question Type : MCQ Option Shuffling : No Is Question Mandatory : No Calculator : None Response Time : N.A Think Time : N.A Minimum Instruction Time : 0**

**Correct Marks : 5 Wrong Marks : 1**

**Question Key Details :**

Key	Value
Comprehension	MCQ

Who amongst the following attempted to standardize Binet's test in Urdu and Punjabi ?

- (1) Pramila Pathak
- (2) Prayag Mehta
- (3) M.C. Joshi
- (4) C.H. Rice

**Options :**

212807112449. 1  
212807112450. 2  
212807112451. 3  
212807112452. 4

**Question Number : 53 Question Id : 21280728113 Question Type : MCQ Option Shuffling : No Is Question Mandatory : No Calculator : None Response Time : N.A Think Time : N.A Minimum Instruction Time : 0**

**Correct Marks : 5 Wrong Marks : 1**

**Question Key Details :**

Key	Value
Comprehension	MCQ

निम्न में से किसने बिनने के परीक्षण को उर्दु और पंजाबी में मानकीकृत करने का प्रयास किया ?

- (1) प्रमिला पाठक
- (2) प्रजा मेहता
- (3) एम. सी. जोशी
- (4) सी. एच राइस

**Options :**

212807112449. 1  
212807112450. 2  
212807112451. 3  
212807112452. 4

**Question Number : 54 Question Id : 21280728114 Question Type : MCQ Option Shuffling : No Is Question Mandatory : No Calculator : None Response Time : N.A Think Time : N.A Minimum Instruction Time : 0**

**Correct Marks : 5 Wrong Marks : 1**



**Question Key Details :**

Key	Value
Comprehension	MCQ

Arthur Jensen proposed a hierarchical model of intelligence consisting of abilities operating at two levels. These levels are :

- (1) Associative learning, cognitive competence
- (2) General factor, specific factor,
- (3) Verbal learning, Cognitive Learning
- (4) Operation, contents

**Options :**

212807112453. 1  
212807112454. 2  
212807112455. 3  
212807112456. 4

**Question Number : 54 Question Id : 21280728114 Question Type : MCQ Option Shuffling : No Is Question Mandatory : No Calculator : None Response Time : N.A Think Time : N.A Minimum Instruction Time : 0**

**Correct Marks : 5 Wrong Marks : 1**

**Question Key Details :**

Key	Value
Comprehension	MCQ

आर्थर जेनसन द्वारा एक बुद्धि का क्रमागत प्रारूप, जो दो स्तरीय बुद्धि संचालन की क्षमताओं से बना है, ये दो स्तर हैं :

- (1) साहचर्य अधिगम, संज्ञानात्मक क्षमता
- (2) सामान्य पक्ष, विशेष पक्ष
- (3) शाब्दिक अधिगम, संज्ञानात्मक अधिगम
- (4) संचालन, विषयवस्तु

**Options :**

212807112453. 1  
212807112454. 2  
212807112455. 3  
212807112456. 4

**Question Number : 55 Question Id : 21280728115 Question Type : MCQ Option Shuffling : No Is Question Mandatory : No Calculator : None Response Time : N.A Think Time : N.A Minimum Instruction Time : 0**

**Correct Marks : 5 Wrong Marks : 1**

**Question Key Details :**

Key	Value
Comprehension	MCQ

Characteristics of gifted children are :

- (A) Independent and non-conformist
- (B) Remarkable ability in a specific field
- (C) High speed in processing information
- (D) Typically slower than their peers
- (E) High level of intrinsic motivation and self esteem

Choose the **correct** answer from the options given below :

- (1) (A), (B), (C) only
- (2) (A), (B), (D) only
- (3) (A), (C), (D) only
- (4) (A), (C), (E) only

**Options :**

- 212807112457. 1
- 212807112458. 2
- 212807112459. 3
- 212807112460. 4

**Question Number : 55 Question Id : 21280728115 Question Type : MCQ Option Shuffling : No Is Question Mandatory : No Calculator : None Response Time : N.A Think Time : N.A Minimum Instruction Time : 0**

**Correct Marks : 5 Wrong Marks : 1**

**Question Key Details :**

Key	Value
Comprehension	MCQ

प्रतिभाशाली बच्चों की विशेषताएं हैं :

- (A) स्वतन्त्र और नॉनकन्फर्मिस्ट
- (B) विशिष्ट क्षेत्र में विशेष योग्यता
- (C) सूचनाओं को तेज संसाधन
- (D) अपने साथियों की तुलना में धीमा
- (E) आन्तरिक अभिप्रेरणा और आत्म सम्मान का उच्च स्तर

नीचे दिए गए विकल्पों में से **सही** उत्तर का चयन कीजिए :

- (1) केवल (A), (B), (C)
- (2) केवल (A), (B), (D)
- (3) केवल (A), (C), (D)
- (4) केवल (A), (C), (E)

**Options :**

- 212807112457. 1
- 212807112458. 2
- 212807112459. 3
- 212807112460. 4

**Question Number : 56 Question Id : 21280728116 Question Type : MCQ Option Shuffling : No Is Question Mandatory : No Calculator : None Response Time : N.A Think Time : N.A Minimum Instruction Time : 0**

**Correct Marks : 5 Wrong Marks : 1**

**Question Key Details :**

Key	Value
Comprehension	MCQ

Match List - I with List - II.

**List - I**

- (A) Charles Spearman  
(B) Alfred Binet  
(C) Arthur Jensen  
(D) Howard Gardner

**List - II**

- (I) Hierarchical model of Intelligence  
(II) Theory of Multiple Intelligence  
(III) Two factor theory  
(IV) Uni factor theory

Choose the **correct** answer from the options given below :

- (1) (A)-(IV), (B)-(III), (C)-(I), (D)-(II)  
(2) (A)-(III), (B)-(IV), (C)-(I), (D)-(II)  
(3) (A)-(III), (B)-(IV), (C)-(II), (D)-(I)  
(4) (A)-(IV), (B)-(III), (C)-(II), (D)-(I)

**Options :**

212807112461. 1  
212807112462. 2  
212807112463. 3  
212807112464. 4

**Question Number : 56 Question Id : 21280728116 Question Type : MCQ Option Shuffling : No Is Question Mandatory : No Calculator : None Response Time : N.A Think Time : N.A Minimum Instruction Time : 0**

**Correct Marks : 5 Wrong Marks : 1**

**Question Key Details :**

Key	Value
Comprehension	MCQ

**सूची-I से सूची-II का मिलान कीजिए :**

**सूची-I**

- (A) चार्ल्स स्पीयरमैन  
(B) अल्फ्रेड बिने  
(C) आर्थर जेनसेन  
(D) हावर्ड गार्डनर

**सूची-II**

- (I) बुद्धि का क्रमागत प्रारूप  
(II) बुद्धि का बहुकारक सिद्धान्त  
(III) द्वि कारक सिद्धान्त  
(IV) एक कारक सिद्धान्त

नीचे दिए गए विकल्पों में से **सही** उत्तर का चयन कीजिए :

- (1) (A)-(IV), (B)-(III), (C)-(I), (D)-(II)  
(2) (A)-(III), (B)-(IV), (C)-(I), (D)-(II)  
(3) (A)-(III), (B)-(IV), (C)-(II), (D)-(I)  
(4) (A)-(IV), (B)-(III), (C)-(II), (D)-(I)

**Options :**

212807112461. 1  
212807112462. 2  
212807112463. 3  
212807112464. 4

**Question Number : 57 Question Id : 21280728117 Question Type : MCQ Option Shuffling : No Is Question Mandatory : No Calculator : None Response Time : N.A Think Time : N.A Minimum Instruction Time : 0**

**Correct Marks : 5 Wrong Marks : 1**

**Question Key Details :**

Key	Value
Comprehension	MCQ

Read and arrange the given points as per American Association on Mental Deficiency (AAMD's) views on intellectual disability.

- (A) Deficits in a person's capacity to be independent and deal effectively with the environment.
- (B) The deficits must be observed during developmental period (0-18) yrs
- (C) The definition points to three basic features
- (D) A person must show significantly sub-average intellectual functioning

Choose the **correct** answer from the options given below :

- (1) (C), (B), (A), (D)
- (2) (C), (D), (A), (B)
- (3) (C), (A), (D), (B)
- (4) (C), (B), (D), (A)

**Options :**

- 212807112465. 1
- 212807112466. 2
- 212807112467. 3
- 212807112468. 4

**Question Number : 57 Question Id : 21280728117 Question Type : MCQ Option Shuffling : No Is Question Mandatory : No Calculator : None Response Time : N.A Think Time : N.A Minimum Instruction Time : 0**

**Correct Marks : 5 Wrong Marks : 1**

**Question Key Details :**

Key	Value
Comprehension	MCQ

दिये गये बिन्दुओं को 'अमेरिकन एसोसिएशन आफ मेंटल डिफिशियन्सी' (AAMD) के बौद्धिक विकलांगता के बारे में विचारों को पढ़िए और व्यवस्थित कीजिए।

- (A) वातावरण के साथ स्वतन्त्र और प्रभावी ढंग से निपटने की व्यक्ति की क्षमता में कमी
- (B) विकासात्मक अवधि (0-18 वर्ष) के दौरान आशक्तता का निरीक्षण करना
- (C) परिभाषा की तीन मूल विशेषताएँ हैं
- (D) व्यक्ति का बौद्धिक प्रकार्यात्मकता सामान्य स्तर से पर्याप्त कम हो।

नीचे दिए गए विकल्पों में से **सही** उत्तर का चयन कीजिए :

- (1) (C), (B), (A), (D)
- (2) (C), (D), (A), (B)
- (3) (C), (A), (D), (B)
- (4) (C), (B), (D), (A)

**Options :**

- 212807112465. 1
- 212807112466. 2
- 212807112467. 3
- 212807112468. 4

**Question Number : 58 Question Id : 21280728118 Question Type : MCQ Option Shuffling : No Is Question Mandatory : No Calculator : None Response Time : N.A Think Time : N.A Minimum Instruction Time : 0**

**Correct Marks : 5 Wrong Marks : 1**

**Question Key Details :**

Key	Value
Comprehension	MCQ

Amongst the following, which is **not** indicative of a healthy personality according to humanistic theorists.

- (A) Healthy person has a quest to know oneself deeply.
- (B) Healthy persons accept their true feelings, thoughts and behaviour without disguise
- (C) Healthy personality usually is rooted in childhood experiences and are not trapped in "here and now"
- (D) Healthy personality usually dwell in the future through anxious expectations and distorted defences

Choose the **correct** answer from the options given below :

- (1) (B) and (D) Only
- (2) (D) and (A) Only
- (3) (A) and (B) Only
- (4) (C) and (D) Only

**Options :**

- 212807112469. 1
- 212807112470. 2
- 212807112471. 3
- 212807112472. 4

**Question Number : 58 Question Id : 21280728118 Question Type : MCQ Option Shuffling : No Is Question Mandatory : No Calculator : None Response Time : N.A Think Time : N.A Minimum Instruction Time : 0**

**Correct Marks : 5 Wrong Marks : 1**

**Question Key Details :**

Key	Value
Comprehension	MCQ

मानवतावादी सिद्धान्तवादियों के अनुसार, निम्न में से कौन सा स्वस्थ व्यक्तित्व को परिभाषित नहीं करता है ?

- (A) स्वस्थ व्यक्ति अपने को गहराई से जानने की जिज्ञासा रखता है।
- (B) स्वस्थ व्यक्ति उनकी सच्ची भावनाओं, विचारों और व्यवहार को बिना छुपाये के स्वीकार करता है।
- (C) स्वस्थ व्यक्तित्व, अक्सर बचपन के अनुभवों से जुड़े होते हैं और वर्तमान में नहीं रहते हैं तथा वे किसी बँधन में नहीं फँसते हैं।
- (D) स्वस्थ व्यक्तित्व अक्सर दुश्चिन्ताजनक अपेक्षाओं और विकृत रक्षा के माध्यम से भविष्य को लेकर परेशान नहीं होते हैं।

नीचे दिए गए विकल्पों में से **सही** उत्तर का चयन कीजिए :

- (1) केवल (B) और (D)
- (2) केवल (D) और (A)
- (3) केवल (A) और (B)
- (4) केवल (C) और (D)

**Options :**

- 212807112469. 1
- 212807112470. 2
- 212807112471. 3
- 212807112472. 4

**Question Number : 59 Question Id : 21280728119 Question Type : MCQ Option Shuffling : No Is Question Mandatory : No Calculator : None Response Time : N.A Think Time : N.A Minimum Instruction Time : 0**

**Correct Marks : 5 Wrong Marks : 1**

**Question Key Details :**

Key	Value
Comprehension	MCQ

**Match List - I with List - II.****List - I****Types of Personality**

(A) Type A

(B) Type D

(C) Type B

(D) Type C

**List - II****Characteristics**

(I) Relaxed

(II) Proneness to cancer

(III) Proneness to Depression

(IV) Hypertension

Choose the **correct** answer from the options given below :

(1) (A)-(I), (B)-(II), (C)-(IV), (D)-(III)

(2) (A)-(IV), (B)-(III), (C)-(I), (D)-(II)

(3) (A)-(IV), (B)-(II), (C)-(III), (D)-(I)

(4) (A)-(III), (B)-(I), (C)-(II), (D)-(IV)

**Options :**

212807112473. 1

212807112474. 2

212807112475. 3

212807112476. 4

**Question Number : 59 Question Id : 21280728119 Question Type : MCQ Option Shuffling : No Is Question Mandatory : No Calculator : None Response Time : N.A Think Time : N.A Minimum Instruction Time : 0**

**Correct Marks : 5 Wrong Marks : 1****Question Key Details :**

Key	Value
Comprehension	MCQ

**सूची-I से सूची-II का मिलान कीजिए :****सूची-I****व्यक्तित्व का प्रकार**

(A) टाइप A

(B) टाइप D

(C) टाइप B

(D) टाइप C

**सूची-II****विशेषताएँ**

(I) निश्चित

(II) कैंसर के प्रति संवेदनशील

(III) अवसाद के प्रति प्रवणता

(IV) तनाव

नीचे दिए गए विकल्पों में से **सही** उत्तर का चयन कीजिए :

(1) (A)-(I), (B)-(II), (C)-(IV), (D)-(III)

(2) (A)-(IV), (B)-(III), (C)-(I), (D)-(II)

(3) (A)-(IV), (B)-(II), (C)-(III), (D)-(I)

(4) (A)-(III), (B)-(I), (C)-(II), (D)-(IV)

**Options :**

212807112473. 1

212807112474. 2

212807112475. 3

212807112476. 4

Question Number : 60 Question Id : 21280728120 Question Type : MCQ Option Shuffling : No Is Question Mandatory : No Calculator : None Response Time : N.A Think Time : N.A Minimum Instruction Time : 0

Correct Marks : 5 Wrong Marks : 1

Question Key Details :

Key	Value
Comprehension	MCQ

Arrange the following stages of psychosexual stages of development by Freud in the increasing order with regard to age of the child.

- (A) Anal stage
- (B) Oral stage
- (C) Phallic stage
- (D) Genital stage
- (E) Latency stage

Choose the **correct** answer from the options given below :

- (1) (E), (D), (C), (B), (A)
- (2) (A), (B), (C), (D), (E)
- (3) (B), (A), (C), (E), (D)
- (4) (B), (A), (C), (D), (E)

Options :

- 212807112477. 1
- 212807112478. 2
- 212807112479. 3
- 212807112480. 4

Question Number : 60 Question Id : 21280728120 Question Type : MCQ Option Shuffling : No Is Question Mandatory : No Calculator : None Response Time : N.A Think Time : N.A Minimum Instruction Time : 0

Correct Marks : 5 Wrong Marks : 1

Question Key Details :

Key	Value
Comprehension	MCQ

फ्रायड की मनेलैंगिक अवस्थाओ के स्तरो को बच्चे की आयु के सम्बन्ध मे आरोही क्रम में व्यवस्थित कीजिए :

- (A) गुदीय अवस्था
- (B) मौखिक अवस्था
- (C) लैंगिक अवस्था
- (D) जननांगीय अवस्था
- (E) कामप्रसुप्ति अवस्था

नीचे दिए गए विकल्पों में से **सही** उत्तर का चयन कीजिए :

- (1) (E), (D), (C), (B), (A)
- (2) (A), (B), (C), (D), (E)
- (3) (B), (A), (C), (E), (D)
- (4) (B), (A), (C), (D), (E)

Options :

- 212807112477. 1
- 212807112478. 2
- 212807112479. 3
- 212807112480. 4

Question Number : 61 Question Id : 21280728121 Question Type : MCQ Option Shuffling : No Is Question Mandatory : No Calculator : None  
Response Time : N.A Think Time : N.A Minimum Instruction Time : 0

Correct Marks : 5 Wrong Marks : 1

Question Key Details :

Key	Value
Comprehension	MCQ

According to Allport, a single trait that dominates an individual's entire personality is known as \_\_\_\_\_.

- (1) Source trait
- (2) Cardinal trait
- (3) Central trait
- (4) Surface trait

Options :

212807112481. 1  
212807112482. 2  
212807112483. 3  
212807112484. 4

Question Number : 61 Question Id : 21280728121 Question Type : MCQ Option Shuffling : No Is Question Mandatory : No Calculator : None  
Response Time : N.A Think Time : N.A Minimum Instruction Time : 0

Correct Marks : 5 Wrong Marks : 1

Question Key Details :

Key	Value
Comprehension	MCQ

ऑलपोर्ट के अनुसार, एक विशेषक जो एक व्यक्ति के सम्पूर्ण व्यक्तित्व को प्रभावित करता है, कहलाता है \_\_\_\_\_ ।

- (1) मूल विशेषक
- (2) प्रमुख (कार्डिनल) विशेषक
- (3) केन्द्रीय विशेषक
- (4) सतही विशेषक

Options :

212807112481. 1  
212807112482. 2  
212807112483. 3  
212807112484. 4

Question Number : 62 Question Id : 21280728122 Question Type : MCQ Option Shuffling : No Is Question Mandatory : No Calculator : None  
Response Time : N.A Think Time : N.A Minimum Instruction Time : 0

Correct Marks : 5 Wrong Marks : 1

Question Key Details :

Key	Value
Comprehension	MCQ

When a person defends against anxiety by adopting behaviour opposite to one's true feelings it is known as :

- (1) Repression
- (2) Denial
- (3) Projection
- (4) Reaction formation

Options :

212807112485. 1  
212807112486. 2  
212807112487. 3



Question Number : 62 Question Id : 21280728122 Question Type : MCQ Option Shuffling : No Is Question Mandatory : No Calculator : None  
Response Time : N.A Think Time : N.A Minimum Instruction Time : 0

Correct Marks : 5 Wrong Marks : 1

Question Key Details :

Key	Value
Comprehension	MCQ

जब एक व्यक्ति दुश्चिंता से बचाव के लिये अपने असली व्यवहार से विपरीत व्यवहार करता है, यह जाना जाता है :

- (1) दमन
- (2) अस्वीकार्यता
- (3) प्रक्षेपण
- (4) प्रतिक्रिया निर्माण

Options :

212807112485. 1  
212807112486. 2  
212807112487. 3  
212807112488. 4

Question Number : 63 Question Id : 21280728123 Question Type : MCQ Option Shuffling : No Is Question Mandatory : No Calculator : None  
Response Time : N.A Think Time : N.A Minimum Instruction Time : 0

Correct Marks : 5 Wrong Marks : 1

Question Key Details :

Key	Value
Comprehension	MCQ

Self-Regulation refers to -

- (1) Ability to control one's emotions
- (2) Ability to organize and monitor one's behaviour
- (3) Ability to instruct oneself about emotions and behaviour
- (4) Ability to reward oneself for good behaviour

Options :

212807112489. 1  
212807112490. 2  
212807112491. 3  
212807112492. 4

Question Number : 63 Question Id : 21280728123 Question Type : MCQ Option Shuffling : No Is Question Mandatory : No Calculator : None  
Response Time : N.A Think Time : N.A Minimum Instruction Time : 0

Correct Marks : 5 Wrong Marks : 1

Question Key Details :

Key	Value
Comprehension	MCQ

आत्म नियंत्रण सम्बन्धित है -

- (1) भावनाओं के नियंत्रण की योग्यता
- (2) व्यवहार के निरीक्षण और व्यवस्थित करने की योग्यता
- (3) भावनाओं और व्यवहार के बारे में निर्देशन की योग्यता
- (4) अच्छे व्यवहार के लिए पुरस्कार की योग्यता

Options :

212807112489. 1  
212807112490. 2

212807112491. 3  
212807112492. 4

**Question Number : 64 Question Id : 21280728124 Question Type : MCQ Option Shuffling : No Is Question Mandatory : No Calculator : None  
Response Time : N.A Think Time : N.A Minimum Instruction Time : 0  
Correct Marks : 5 Wrong Marks : 1**

**Question Key Details :**

Key	Value
Comprehension	MCQ

According to the Triguna theory of personality (Charak Samhita), the \_\_\_\_\_ guna characterizes laziness, anger, arrogance, depression and helplessness :

- (1) Sattva
- (2) Kapha
- (3) Rajas
- (4) Tamas

**Options :**

212807112493. 1  
212807112494. 2  
212807112495. 3  
212807112496. 4

**Question Number : 64 Question Id : 21280728124 Question Type : MCQ Option Shuffling : No Is Question Mandatory : No Calculator : None  
Response Time : N.A Think Time : N.A Minimum Instruction Time : 0  
Correct Marks : 5 Wrong Marks : 1**

**Question Key Details :**

Key	Value
Comprehension	MCQ

व्यक्तित्व के त्रिगुण सिद्धांत (चरक संहिता) के अनुसार \_\_\_\_\_ गुण चिह्नित करता है आलस, क्रोध, अहंकार, आवसाद और लाचारी के रूप में।

- (1) सत्व
- (2) कफ
- (3) रजस
- (4) तमस

**Options :**

212807112493. 1  
212807112494. 2  
212807112495. 3  
212807112496. 4

**Question Number : 65 Question Id : 21280728125 Question Type : MCQ Option Shuffling : No Is Question Mandatory : No Calculator : None  
Response Time : N.A Think Time : N.A Minimum Instruction Time : 0  
Correct Marks : 5 Wrong Marks : 1**

**Question Key Details :**

Key	Value
Comprehension	MCQ

Rosenzweig developed a test with the use of cartoon like pictures, a series of situations in which one person frustrates another or calls attention to frustrating condition.

- (1) Draw - a - Person - test
- (2) Sentence completion test
- (3) The Thematic Apperception test
- (4) Picture - Frustration test

**Options :**

212807112497. 1  
 212807112498. 2  
 212807112499. 3  
 212807112500. 4

**Question Number : 65 Question Id : 21280728125 Question Type : MCQ Option Shuffling : No Is Question Mandatory : No Calculator : None Response Time : N.A Think Time : N.A Minimum Instruction Time : 0**

**Correct Marks : 5 Wrong Marks : 1**

**Question Key Details :**

Key	Value
Comprehension	MCQ

रोज़नविग ने परीक्षण विकसित किया। इस परीक्षण में कार्टून जैसी तस्वीरों से स्थितियों की एक शृंखला होती है जिसमें एक व्यक्ति दूसरे को हताश करता है या हताशापूर्ण स्थिति की तरफ ध्यान दिलाता है।

- (1) एक व्यक्ति का चित्रण परीक्षण
- (2) वाक्य समापने परीक्षण
- (3) कथानक संप्रत्यक्षण परीक्षण
- (4) चित्रगत कुंठा परीक्षण

**Options :**

212807112497. 1  
 212807112498. 2  
 212807112499. 3  
 212807112500. 4

**Question Number : 66 Question Id : 21280728126 Question Type : MCQ Option Shuffling : No Is Question Mandatory : No Calculator : None Response Time : N.A Think Time : N.A Minimum Instruction Time : 0**

**Correct Marks : 5 Wrong Marks : 1**

**Question Key Details :**

Key	Value
Comprehension	MCQ

Irrational fear related to specific objects is the characteristic of :

- (1) Panic Disorder
- (2) Generalised Anxiety Disorder
- (3) Specific Phobia
- (4) Separation Anxiety Disorder

**Options :**

212807112501. 1  
 212807112502. 2  
 212807112503. 3  
 212807112504. 4

**Question Number : 66 Question Id : 21280728126 Question Type : MCQ Option Shuffling : No Is Question Mandatory : No Calculator : None Response Time : N.A Think Time : N.A Minimum Instruction Time : 0**

**Correct Marks : 5 Wrong Marks : 1**

**Question Key Details :**

Key	Value
Comprehension	MCQ

विशेष वस्तुओं के संबंध में अर्त्ताकिक भय निम्नलिखित में से किसकी विशेषता है ?

- (1) घबराहट विकार
- (2) सामान्यीकृत दुश्चिंता विकार
- (3) विशिष्ट दुर्भीति
- (4) वियोगज दुश्चिंता विकार

Options :

212807112501. 1  
212807112502. 2  
212807112503. 3  
212807112504. 4

Question Number : 67 Question Id : 21280728127 Question Type : MCQ Option Shuffling : No Is Question Mandatory : No Calculator : None  
Response Time : N.A Think Time : N.A Minimum Instruction Time : 0

Correct Marks : 5 Wrong Marks : 1

Question Key Details :

Key	Value
Comprehension	MCQ

Blindness, paralysis, deafness without any biological reason are symptoms of \_\_\_\_\_ disorder.

- (1) Illness anxiety disorder
- (2) Dissociative disorder
- (3) Dissociative amnesia
- (4) Conversion disorder

Options :

212807112505. 1  
212807112506. 2  
212807112507. 3  
212807112508. 4

Question Number : 67 Question Id : 21280728127 Question Type : MCQ Option Shuffling : No Is Question Mandatory : No Calculator : None  
Response Time : N.A Think Time : N.A Minimum Instruction Time : 0

Correct Marks : 5 Wrong Marks : 1

Question Key Details :

Key	Value
Comprehension	MCQ

बिना किसी जैविक कारण के अंधापन पक्षाघात, बहरापन होना किस विकार के लक्षण हैं ?

- (1) बीमारी दुश्चिंता विकार
- (2) विच्छेदी विकार
- (3) विच्छेदी स्मृतिलोप
- (4) परिवर्तन विकार

Options :

212807112505. 1  
212807112506. 2  
212807112507. 3  
212807112508. 4

Question Number : 68 Question Id : 21280728128 Question Type : MCQ Option Shuffling : No Is Question Mandatory : No Calculator : None  
Response Time : N.A Think Time : N.A Minimum Instruction Time : 0

Correct Marks : 5 Wrong Marks : 1

Question Key Details :

Key	Value
-----	-------

Rahim constantly keeps worrying about his future all the time, and has apprehensions about his admission, to any college. Rahim also constantly scans his environment for danger. Which type of psychological disorders is reflected in Rahim's case ?

- (1) Panic disorder
- (2) Specific Phobia
- (3) Agoraphobia
- (4) Generalised anxiety disorder

**Options :**

212807112509. 1  
212807112510. 2  
212807112511. 3  
212807112512. 4

**Question Number : 68 Question Id : 21280728128 Question Type : MCQ Option Shuffling : No Is Question Mandatory : No Calculator : None Response Time : N.A Think Time : N.A Minimum Instruction Time : 0**

**Correct Marks : 5 Wrong Marks : 1**

**Question Key Details :**

Key	Value
Comprehension	MCQ

रहीम निरंतर अपने भविष्य के बारे में हर समय चिंतित रहता है और किसी कॉलेज में प्रवेश को लेकर आशंकित रहता है। रहीम निरंतर अपने आसपास खतरे को लेकर चौकन्ना रहता है। रहीम के मामले में किस प्रकार का मनोविकार प्रदर्शित होता है ?

- (1) घबराहट विकार
- (2) विशिष्ट दुर्भीति
- (3) विवृतिभीति (एगोराफोबिया)
- (4) सामान्यीकृत दुश्चिंता विकार

**Options :**

212807112509. 1  
212807112510. 2  
212807112511. 3  
212807112512. 4

**Question Number : 69 Question Id : 21280728129 Question Type : MCQ Option Shuffling : No Is Question Mandatory : No Calculator : None Response Time : N.A Think Time : N.A Minimum Instruction Time : 0**

**Correct Marks : 5 Wrong Marks : 1**

**Question Key Details :**

Key	Value
Comprehension	MCQ

Match List - I with List - II.

**List - I**

**Types of Personality**

- (A) Hostile aggression  
(B) Verbal aggression  
(C) Physical aggression  
(D) Proactive aggression

**List - II**

**Characteristics**

- (I) Dominating and bullying others without provocation  
(II) Hitting and or fighting  
(III) Name-calling, swearing  
(IV) Directed at inflicting injury to others

Choose the **correct** answer from the options given below :

- (1) (A)-(I), (B)-(II), (C)-(III), (D)-(IV)  
(2) (A)-(I), (B)-(II), (C)-(IV), (D)-(III)  
(3) (A)-(IV), (B)-(III), (C)-(I), (D)-(II)  
(4) (A)-(IV), (B)-(III), (C)-(II), (D)-(I)

**Options :**

212807112513. 1  
212807112514. 2  
212807112515. 3  
212807112516. 4

Question Number : 69 Question Id : 21280728129 Question Type : MCQ Option Shuffling : No Is Question Mandatory : No Calculator : None  
Response Time : N.A Think Time : N.A Minimum Instruction Time : 0

Correct Marks : 5 Wrong Marks : 1

**Question Key Details :**

Key	Value
Comprehension	MCQ

सूची-I से सूची-II का मिलान कीजिए :

**सूची-I**

**व्यक्तित्व के प्रकार**

- (A) शत्रुतापूर्ण आक्रामकता  
(B) शाब्दिक आक्रामकता  
(C) शारीरिक आक्रामकता  
(D) अग्रलक्षी आक्रामकता

**सूची-II**

**अभिलक्षण**

- (I) बिना उकसावे के दूसरों पर हावी होना और धमकाना  
(II) मारना और झगड़ना  
(III) गालियां देना, कशम देना  
(IV) दूसरों को चोट पहुंचाने के इरादे से प्रदर्शित आक्रामकता

नीचे दिए गए विकल्पों में से **सही** उत्तर का चयन कीजिए :

- (1) (A)-(I), (B)-(II), (C)-(III), (D)-(IV)  
(2) (A)-(I), (B)-(II), (C)-(IV), (D)-(III)  
(3) (A)-(IV), (B)-(III), (C)-(I), (D)-(II)  
(4) (A)-(IV), (B)-(III), (C)-(II), (D)-(I)

**Options :**

212807112513. 1  
212807112514. 2  
212807112515. 3  
212807112516. 4

Question Number : 70 Question Id : 21280728130 Question Type : MCQ Option Shuffling : No Is Question Mandatory : No Calculator : None  
Response Time : N.A Think Time : N.A Minimum Instruction Time : 0

Correct Marks : 5 Wrong Marks : 1

**Question Key Details :**

Key	Value
Comprehension	MCQ

State the correct order of Intellectual disability in terms of decreasing intellectual functioning (I. Q. range) :

- (A) Severe
- (B) Mild
- (C) Profound
- (D) Moderate

Choose the **correct** answer from the options given below :

- (1) (B), (D), (A), (C)
- (2) (A), (B), (C), (D)
- (3) (D), (A), (C), (B)
- (4) (C), (B), (D), (A)

**Options :**

- 212807112517. 1
- 212807112518. 2
- 212807112519. 3
- 212807112520. 4

**Question Number : 70 Question Id : 21280728130 Question Type : MCQ Option Shuffling : No Is Question Mandatory : No Calculator : None Response Time : N.A Think Time : N.A Minimum Instruction Time : 0**

**Correct Marks : 5 Wrong Marks : 1**

**Question Key Details :**

Key	Value
Comprehension	MCQ

बौद्धिक प्रकार्यत्मकता (I. Q. रेंज) के संदर्भ में बौद्धिक अक्षमता का सही क्रम बताइए घटते हुए क्रम में दर्शायें

- (A) तीव्र
- (B) मंद
- (C) गंभीर
- (D) संयत

नीचे दिए गए विकल्पों में से **सही** उत्तर का चयन कीजिए :

- (1) (B), (D), (A), (C)
- (2) (A), (B), (C), (D)
- (3) (D), (A), (C), (B)
- (4) (C), (B), (D), (A)

**Options :**

- 212807112517. 1
- 212807112518. 2
- 212807112519. 3
- 212807112520. 4

**Question Number : 71 Question Id : 21280728131 Question Type : MCQ Option Shuffling : No Is Question Mandatory : No Calculator : None Response Time : N.A Think Time : N.A Minimum Instruction Time : 0**

**Correct Marks : 5 Wrong Marks : 1**

**Question Key Details :**

Key	Value
Comprehension	MCQ

Symptoms of Post-Traumatic Stress Disorder include :

- (1) Emotional numbing, happiness, feeling of elation
- (2) Flashbacks, feeling of elation, thoughts about ill health
- (3) Recurrent dreams, flashbacks, emotional numbing
- (4) Thoughts about ill health, happiness, flashbacks

**Options :**

212807112521. 1  
212807112522. 2  
212807112523. 3  
212807112524. 4

**Question Number : 71 Question Id : 21280728131 Question Type : MCQ Option Shuffling : No Is Question Mandatory : No Calculator : None Response Time : N.A Think Time : N.A Minimum Instruction Time : 0**

**Correct Marks : 5 Wrong Marks : 1**

**Question Key Details :**

Key	Value
Comprehension	MCQ

उत्तर-अभिघातज तनाव विकार में निम्नलिखित में से कौनसे लक्षण शामिल हैं ?

- (1) सांवेगिक शून्यता, आनंद, उल्लास की भावना
- (2) अतीतावलोकन उल्लास की भावना, अस्वस्थता के बारे में विचार
- (3) बार-बार किसी स्वप्न का आना, अतीतावलोकन, सांवेगिक शून्यता
- (4) अस्वस्थता के बारे में विचार, आनंद, अतीतावलोकन

**Options :**

212807112521. 1  
212807112522. 2  
212807112523. 3  
212807112524. 4

**Question Number : 72 Question Id : 21280728132 Question Type : MCQ Option Shuffling : No Is Question Mandatory : No Calculator : None Response Time : N.A Think Time : N.A Minimum Instruction Time : 0**

**Correct Marks : 5 Wrong Marks : 1**

**Question Key Details :**

Key	Value
Comprehension	MCQ

An important characteristic of Bipolar disorder is that it includes :

- (1) Only Mania
- (2) Only Depression
- (3) Both Mania and depression
- (4) Neither Mania nor depression

**Options :**

212807112525. 1  
212807112526. 2  
212807112527. 3  
212807112528. 4

**Question Number : 72 Question Id : 21280728132 Question Type : MCQ Option Shuffling : No Is Question Mandatory : No Calculator : None Response Time : N.A Think Time : N.A Minimum Instruction Time : 0**

**Correct Marks : 5 Wrong Marks : 1**

**Question Key Details :**

Key	Value
Comprehension	MCQ



द्विध्रुवीय विकार की निम्नांकित महत्वपूर्ण विशेषता है :

- (1) केवल उन्माद
- (2) केवल अवसाद
- (3) उन्माद और अवसाद दोनों
- (4) न तो उन्माद और न ही अवसाद

Options :

212807112525. 1  
212807112526. 2  
212807112527. 3  
212807112528. 4

Question Number : 73 Question Id : 21280728133 Question Type : MCQ Option Shuffling : No Is Question Mandatory : No Calculator : None  
Response Time : N.A Think Time : N.A Minimum Instruction Time : 0

Correct Marks : 5 Wrong Marks : 1

Question Key Details :

Key	Value
Comprehension	MCQ

Which of these is a positive symptom of Schizophrenia ?

- (1) Alogia
- (2) Delusions
- (3) Catatonia
- (4) Avolition

Options :

212807112529. 1  
212807112530. 2  
212807112531. 3  
212807112532. 4

Question Number : 73 Question Id : 21280728133 Question Type : MCQ Option Shuffling : No Is Question Mandatory : No Calculator : None  
Response Time : N.A Think Time : N.A Minimum Instruction Time : 0

Correct Marks : 5 Wrong Marks : 1

Question Key Details :

Key	Value
Comprehension	MCQ

निम्नलिखित में से कौन सा मनेविदलता (स्किजोफ्रेनिया) का एक सकारात्मक लक्षण है ?

- (1) अलोगिया
- (2) भ्रमाशक्ति
- (3) कैटाटोनिया
- (4) इच्छाशक्ति न्यूनता (एवोलिशन)

Options :

212807112529. 1  
212807112530. 2  
212807112531. 3  
212807112532. 4

Question Number : 74 Question Id : 21280728134 Question Type : MCQ Option Shuffling : No Is Question Mandatory : No Calculator : None  
Response Time : N.A Think Time : N.A Minimum Instruction Time : 0

Correct Marks : 5 Wrong Marks : 1

Question Key Details :

Key	Value
-----	-------

Having a fear of entering unfamiliar situation is known as :

- (1) Social Phobia
- (2) Agoraphobia
- (3) Claustrophobia
- (4) Hydrophobia

**Options :**

212807112533. 1  
212807112534. 2  
212807112535. 3  
212807112536. 4

**Question Number : 74 Question Id : 21280728134 Question Type : MCQ Option Shuffling : No Is Question Mandatory : No Calculator : None Response Time : N.A Think Time : N.A Minimum Instruction Time : 0**

**Correct Marks : 5 Wrong Marks : 1**

**Question Key Details :**

Key	Value
Comprehension	MCQ

अपरिचित स्थिति में प्रवेश करने के भय से ग्रसित होने को किस रूप में जाना जाता है ?

- (1) सामाजिक दुर्भीति
- (2) विवृतिभीति (एगोराफोबिया)
- (3) संवृतिभीति (अकेले रहने से भय)
- (4) जलभीति

**Options :**

212807112533. 1  
212807112534. 2  
212807112535. 3  
212807112536. 4

**Question Number : 75 Question Id : 21280728135 Question Type : MCQ Option Shuffling : No Is Question Mandatory : No Calculator : None Response Time : N.A Think Time : N.A Minimum Instruction Time : 0**

**Correct Marks : 5 Wrong Marks : 1**

**Question Key Details :**

Key	Value
Comprehension	MCQ

Identify the type of catatonia where patients assume awkward bizarre positions for long periods of time :

- (1) Catatonic Stupor
- (2) Catatonic Rigidity
- (3) Catatonic Posturing
- (4) Catatonic Position

**Options :**

212807112537. 1  
212807112538. 2  
212807112539. 3  
212807112540. 4

**Question Number : 75 Question Id : 21280728135 Question Type : MCQ Option Shuffling : No Is Question Mandatory : No Calculator : None Response Time : N.A Think Time : N.A Minimum Instruction Time : 0**

**Correct Marks : 5 Wrong Marks : 1**

**Question Key Details :**

Key	Value

कैटाटोनिया के उस प्रकार की पहचान करें जिसमें रोगी विचित्र उटपटांग मुद्राओं को लंबे समय तक प्रदर्शित करते हैं :

- (1) कैटाटोनिक जड़िमा
- (2) कैटाटोनिक दृढ़ता
- (3) कैटाटोनिक संस्थिति
- (4) कैटाटोनिक स्थिति

**Options :**

212807112537. 1  
212807112538. 2  
212807112539. 3  
212807112540. 4

**Question Number : 76 Question Id : 21280728136 Question Type : MCQ Option Shuffling : No Is Question Mandatory : No Calculator : None Response Time : N.A Think Time : N.A Minimum Instruction Time : 0**

**Correct Marks : 5 Wrong Marks : 1**

**Question Key Details :**

Key	Value
Comprehension	MCQ

Anshul, a seven year old child is so fearful and anxious about separating from his mother that he doesn't even go out to play. While sleeping he holds his mother's hand tightly and doesn't let her go to the washroom at times. Anshul might be showing symptoms of :

- (1) Specific phobic
- (2) Social anxiety disorder
- (3) Separation anxiety disorder
- (4) Panic disorder

**Options :**

212807112541. 1  
212807112542. 2  
212807112543. 3  
212807112544. 4

**Question Number : 76 Question Id : 21280728136 Question Type : MCQ Option Shuffling : No Is Question Mandatory : No Calculator : None Response Time : N.A Think Time : N.A Minimum Instruction Time : 0**

**Correct Marks : 5 Wrong Marks : 1**

**Question Key Details :**

Key	Value
Comprehension	MCQ

सात वर्षीय बच्चा अंशूल अपनी मां से अलग होने के बारे में इतना भयभीत और चिंतित है कि वह बाहर खेलने भी नहीं जाता। सोते समय वह अपनी मां का हाथ कसकर पकड़ता है और कई बार उसे वॉशरूम भी नहीं जाने देता। अंशूल में किसके लक्षण हो सकते हैं ?

- (1) विशिष्ट दुर्भीति
- (2) सामाजिक दुश्चिंता विकार
- (3) वियोगज दुश्चिंता विकार
- (4) घबराहट विकार

**Options :**

212807112541. 1  
212807112542. 2  
212807112543. 3  
212807112544. 4

Question Number : 77 Question Id : 21280728137 Question Type : MCQ Option Shuffling : No Is Question Mandatory : No Calculator : None  
Response Time : N.A Think Time : N.A Minimum Instruction Time : 0

Correct Marks : 5 Wrong Marks : 1

Question Key Details :

Key	Value
Comprehension	MCQ

In ABC analysis used in Rational Emotive therapy as proposed by Albert Ellis, ABC refers to :

- (1) antecedent - behaviour - consequence
- (2) antecedent - belief - counselling
- (3) antecedent - belief - consequence
- (4) antecedent - belief - cognitive

Options :

- 212807112545. 1
- 212807112546. 2
- 212807112547. 3
- 212807112548. 4

Question Number : 77 Question Id : 21280728137 Question Type : MCQ Option Shuffling : No Is Question Mandatory : No Calculator : None  
Response Time : N.A Think Time : N.A Minimum Instruction Time : 0

Correct Marks : 5 Wrong Marks : 1

Question Key Details :

Key	Value
Comprehension	MCQ

अल्बर्ट एलिस द्वारा प्रतिपादित संवेग तर्क चिकित्सा में प्रयुक्त ABC विश्लेषण में ABC का तात्पर्य है :

- (1) पूर्ववर्ती - व्यवहार - परिणाम
- (2) पूर्ववर्ती - विश्वास - परामर्श
- (3) पूर्ववर्ती - विश्वास - परिणाम
- (4) पूर्ववर्ती - विश्वास - संज्ञानात्मक

Options :

- 212807112545. 1
- 212807112546. 2
- 212807112547. 3
- 212807112548. 4

Question Number : 78 Question Id : 21280728138 Question Type : MCQ Option Shuffling : No Is Question Mandatory : No Calculator : None  
Response Time : N.A Think Time : N.A Minimum Instruction Time : 0

Correct Marks : 5 Wrong Marks : 1

Question Key Details :

Key	Value
Comprehension	MCQ

Two main components of psychotherapy are :

- (1) Contractual nature, unlimited duration
- (2) No Contract with the therapist, limited duration
- (3) Contractual nature, limited duration
- (4) No Contract with the therapist, unlimited duration

Options :

- 212807112549. 1
- 212807112550. 2
- 212807112551. 3
- 212807112552. 4

Question Number : 78 Question Id : 21280728138 Question Type : MCQ Option Shuffling : No Is Question Mandatory : No Calculator : None  
Response Time : N.A Think Time : N.A Minimum Instruction Time : 0

Correct Marks : 5 Wrong Marks : 1

Question Key Details :

Key	Value
Comprehension	MCQ

मनश्चिकित्सा के दो प्रमुख घटक कौनसे हैं ?

- (1) संविधात्मक प्रकृति और असीमित अवधि
- (2) चिकित्सक के साथ कोई अनुबंध नहीं, सीमित अवधि
- (3) संविधात्मक प्रकृति, सीमित अवधि
- (4) चिकित्सक के साथ कोई अनुबंध नहीं, असीमित अवधि

Options :

212807112549. 1  
212807112550. 2  
212807112551. 3  
212807112552. 4

Question Number : 79 Question Id : 21280728139 Question Type : MCQ Option Shuffling : No Is Question Mandatory : No Calculator : None  
Response Time : N.A Think Time : N.A Minimum Instruction Time : 0

Correct Marks : 5 Wrong Marks : 1

Question Key Details :

Key	Value
Comprehension	MCQ

Identify the statements that are true about Aaron Beck's cognitive therapy.

- (A) His theory states that childhood experience provided by family and society develop core schemas
- (B) It involves ABC analysis
- (C) He claimed core schemas give rise to cognitive distortions
- (D) Irrational beliefs are identified as 'must', and 'should'
- (E) The illogical patterns are referred as dysfunctional cognitive structures

Choose the **correct** answer from the options given below :

- (1) (B), (C), (E) Only
- (2) (A), (C), (D) Only
- (3) (A), (C), (E) Only
- (4) (B), (D), (E) Only

Options :

212807112553. 1  
212807112554. 2  
212807112555. 3  
212807112556. 4

Question Number : 79 Question Id : 21280728139 Question Type : MCQ Option Shuffling : No Is Question Mandatory : No Calculator : None  
Response Time : N.A Think Time : N.A Minimum Instruction Time : 0

Correct Marks : 5 Wrong Marks : 1

Question Key Details :

Key	Value
Comprehension	MCQ

उन कथनों की पहचान करें जो ऐरोन बेक की संज्ञानात्मक चिकित्सा के बारे में सही हैं।

- (A) उसका सिद्धांत बताता है कि परिवार और समाज द्वारा प्रदान किए गए बचपन के अनुभव मूल स्कीमा विकसित करते हैं।  
(B) इसमें ABC विश्लेषण सम्मिलित है  
(C) उनका दावा था कि मूल स्कीमा संज्ञानात्मक विवृतियों को उत्पन्न करती है।  
(D) अविवेकी विश्वासों को 'अनिवार्य' और 'चाहिए' के रूप में पहचाना जाता है।  
(E) अतार्किक प्ररूपों को अपक्रियात्मक संज्ञानात्मक संरचनाओं के रूप में उल्लिखित किया जाता है।

नीचे दिए गए विकल्पों में से सही उत्तर का चयन कीजिए :

- (1) केवल (B), (C), (E)  
(2) केवल (A), (C), (D)  
(3) केवल (A), (C), (E)  
(4) केवल (B), (D), (E)

**Options :**

212807112553. 1  
212807112554. 2  
212807112555. 3  
212807112556. 4

**Question Number : 80 Question Id : 21280728140 Question Type : MCQ Option Shuffling : No Is Question Mandatory : No Calculator : None Response Time : N.A Think Time : N.A Minimum Instruction Time : 0**

**Correct Marks : 5 Wrong Marks : 1**

**Question Key Details :**

Key	Value
Comprehension	MCQ

Type of yoga therapy that is effective in the treatment of obsessive compulsive disorder, and is a combination of Pranayama with chanting of mantra, is commonly known as :

- (1) Kundalini yoga  
(2) Vipasana  
(3) Sudarshan Kriya yoga  
(4) Ashtanga yoga

**Options :**

212807112557. 1  
212807112558. 2  
212807112559. 3  
212807112560. 4

**Question Number : 80 Question Id : 21280728140 Question Type : MCQ Option Shuffling : No Is Question Mandatory : No Calculator : None Response Time : N.A Think Time : N.A Minimum Instruction Time : 0**

**Correct Marks : 5 Wrong Marks : 1**

**Question Key Details :**

Key	Value
Comprehension	MCQ

योग चिकित्सा का वह प्रकार जो मनोग्रहित-बाह्यता विकार के उपचार में प्रभावी है और यह मंत्रोच्चारण के साथ प्राणायाम का संयोजन है, इसे सामान्यतः किस रूप में जाना जाता है ?

- (1) कुण्डलिनी योग
- (2) विपसना
- (3) सूदर्शन क्रिया योग
- (4) अष्टांग योग

**Options :**

212807112557. 1  
212807112558. 2  
212807112559. 3  
212807112560. 4

**Question Number : 81 Question Id : 21280728141 Question Type : MCQ Option Shuffling : No Is Question Mandatory : No Calculator : None Response Time : N.A Think Time : N.A Minimum Instruction Time : 0**

**Correct Marks : 5 Wrong Marks : 1**

**Question Key Details :**

Key	Value
Comprehension	MCQ

Steps involved in the treatment of a psychological disorder in psychoanalytical therapy session follow :

- (A) Working through
- (B) Rapport formation
- (C) Termination
- (D) Transference, confrontation
- (E) Insight

Choose the **correct** answer from the options given below :

- (1) (B), (D), (A), (C), (E)
- (2) (C), (D), (B), (A), (E)
- (3) (B), (D), (A), (E), (C)
- (4) (E), (D), (B), (C), (A)

**Options :**

212807112561. 1  
212807112562. 2  
212807112563. 3  
212807112564. 4

**Question Number : 81 Question Id : 21280728141 Question Type : MCQ Option Shuffling : No Is Question Mandatory : No Calculator : None Response Time : N.A Think Time : N.A Minimum Instruction Time : 0**

**Correct Marks : 5 Wrong Marks : 1**

**Question Key Details :**

Key	Value
Comprehension	MCQ

मनोवैज्ञानिक विकार के उपचार में मनो-विश्लेषणात्मक चिकित्सा सत्र में पालन किए जाने वाले चरण में कौन-कौन से हैं ?

- (A) समाकलन कार्य
- (B) संबंध बनाना
- (C) समापन
- (D) अन्यारोपण, प्रतिरोध
- (E) अंतर्दृष्टि

नीचे दिए गए विकल्पों में से सही उत्तर का चयन कीजिए :

- (1) (B), (D), (A), (C), (E)
- (2) (C), (D), (B), (A), (E)
- (3) (B), (D), (A), (E), (C)
- (4) (E), (D), (B), (C), (A)

Options :

- 212807112561. 1
- 212807112562. 2
- 212807112563. 3
- 212807112564. 4

Question Number : 82 Question Id : 21280728142 Question Type : MCQ Option Shuffling : No Is Question Mandatory : No Calculator : None Response Time : N.A Think Time : N.A Minimum Instruction Time : 0

Correct Marks : 5 Wrong Marks : 1

Question Key Details :

Key	Value
Comprehension	MCQ

Little Albert was made to hear a loud noise, the moment he saw a white rat. After certain trials he started crying at the sight of a white rat. This is a classic example of \_\_\_\_\_

- (1) Aversive conditioning
- (2) Positive reinforcement
- (3) Negative reinforcement
- (4) Token economy

Options :

- 212807112565. 1
- 212807112566. 2
- 212807112567. 3
- 212807112568. 4

Question Number : 82 Question Id : 21280728142 Question Type : MCQ Option Shuffling : No Is Question Mandatory : No Calculator : None Response Time : N.A Think Time : N.A Minimum Instruction Time : 0

Correct Marks : 5 Wrong Marks : 1

Question Key Details :

Key	Value
Comprehension	MCQ



बच्चा अत्वर्ट जैसे ही सफेद चूहा देखता था तो उसे एक ऊंचा शोर सुनाया जाता था। कुछ प्रयोगों के बाद सफेद चूहा देखते ही वह रोना आरंभ कर देता था। यह \_\_\_\_\_ का उत्कृष्ट उदाहरण है।

- (1) विमुखी अनुकूलन
- (2) सकारात्मक पुर्नबलन
- (3) नकारात्मक पुर्नबलन
- (4) टोकन इकॉनमी

**Options :**

212807112565. 1  
212807112566. 2  
212807112567. 3  
212807112568. 4

**Question Number : 83 Question Id : 21280728143 Question Type : MCQ Option Shuffling : No Is Question Mandatory : No Calculator : None Response Time : N.A Think Time : N.A Minimum Instruction Time : 0**

**Correct Marks : 5 Wrong Marks : 1**

**Question Key Details :**

Key	Value
Comprehension	MCQ

The following processes are followed while forming impressions.

- (A) The selected information is combined in a systematic manner
- (B) The person who forms the impression is the perceiver and individual about whom the impression is formed is the target
- (C) We draw conclusion about what kind of a person the target is
- (D) We take into account only some bits of information about the target

Choose the **correct** answer from the options given below :

- (1) (B), (D), (A), (C)
- (2) (B), (A), (C), (D)
- (3) (B), (C), (A), (D)
- (4) (B), (D), (C), (A)

**Options :**

212807112569. 1  
212807112570. 2  
212807112571. 3  
212807112572. 4

**Question Number : 83 Question Id : 21280728143 Question Type : MCQ Option Shuffling : No Is Question Mandatory : No Calculator : None Response Time : N.A Think Time : N.A Minimum Instruction Time : 0**

**Correct Marks : 5 Wrong Marks : 1**

**Question Key Details :**

Key	Value
Comprehension	MCQ

छवि अंकन में निम्नांकित प्रक्रियाएँ सम्मिलित हैं।

- (A) चयनित सूचना को व्यवस्थित ढंग से संयोजित की जाती है।
- (B) जो व्यक्ति प्रभाव जमाता है वह बोध ग्राही है और जिस व्यक्ति के बारे में प्रभाव जमाया जाता है वह लक्ष्य है।
- (C) हम निष्कर्ष निकालते हैं कि वह व्यक्ति किस प्रकार का है।
- (D) हम व्यक्ति के बारे में कुछ मात्रा सूचनाओं को विवरण में रखते हैं।

नीचे दिए गए विकल्पों में से सही उत्तर का चयन कीजिए :

- (1) (B), (D), (A), (C)
- (2) (B), (A), (C), (D)
- (3) (B), (C), (A), (D)
- (4) (B), (D), (C), (A)

**Options :**

- 212807112569. 1
- 212807112570. 2
- 212807112571. 3
- 212807112572. 4

**Question Number : 84 Question Id : 21280728144 Question Type : MCQ Option Shuffling : No Is Question Mandatory : No Calculator : None Response Time : N.A Think Time : N.A Minimum Instruction Time : 0**

**Correct Marks : 5 Wrong Marks : 1**

**Question Key Details :**

Key	Value
Comprehension	MCQ

Collection of people assembled for a particular purpose, (to watch a movie) may be called :

- (1) Team
- (2) Crowd
- (3) Audience
- (4) Mob

**Options :**

- 212807112573. 1
- 212807112574. 2
- 212807112575. 3
- 212807112576. 4

**Question Number : 84 Question Id : 21280728144 Question Type : MCQ Option Shuffling : No Is Question Mandatory : No Calculator : None Response Time : N.A Think Time : N.A Minimum Instruction Time : 0**

**Correct Marks : 5 Wrong Marks : 1**

**Question Key Details :**

Key	Value
Comprehension	MCQ

लोगों का समूह जो फिल्म देखने जैसे एक विशिष्ट उद्देश्य के लिए इकेट्ट हुए हैं, इन्हे क्या कहा जा सकता है ?

- (1) दल या टीम
- (2) भीड़
- (3) श्रोता
- (4) असंयत भीड़

**Options :**

- 212807112573. 1
- 212807112574. 2

212807112575. 3  
212807112576. 4

**Question Number : 85 Question Id : 21280728145 Question Type : MCQ Option Shuffling : No Is Question Mandatory : No Calculator : None  
Response Time : N.A Think Time : N.A Minimum Instruction Time : 0  
Correct Marks : 5 Wrong Marks : 1**

**Question Key Details :**

Key	Value
Comprehension	MCQ

Extreme cohesiveness can sometimes lead to disastrous decisions and interfere with effective leadership. This consequence of extreme cohesiveness is identified as :

- (1) Group Polarisation
- (2) Obedience
- (3) Group Think
- (4) Conformity

**Options :**

212807112577. 1  
212807112578. 2  
212807112579. 3  
212807112580. 4

**Question Number : 85 Question Id : 21280728145 Question Type : MCQ Option Shuffling : No Is Question Mandatory : No Calculator : None  
Response Time : N.A Think Time : N.A Minimum Instruction Time : 0  
Correct Marks : 5 Wrong Marks : 1**

**Question Key Details :**

Key	Value
Comprehension	MCQ

अत्यधिक संसकतता कभी-कभी अनर्थकारी निर्णयों की ओर ले जा सकती है और प्रभावी नेतृत्व में बाधा डालती है। अत्यधिक संसकतता के इस परिणाम को किस रूप में पहचाना जाता है ?

- (1) समूह ध्रुवीकरण
- (2) आज्ञापालन
- (3) समूह चिंतन
- (4) अनुरूपता

**Options :**

212807112577. 1  
212807112578. 2  
212807112579. 3  
212807112580. 4

**Question Number : 86 Question Id : 21280728146 Question Type : MCQ Option Shuffling : No Is Question Mandatory : No Calculator : None  
Response Time : N.A Think Time : N.A Minimum Instruction Time : 0  
Correct Marks : 5 Wrong Marks : 1**

**Question Key Details :**

Key	Value
Comprehension	MCQ

In the company of like minded people, when our view is favoured and validated by the public then it is a sort of \_\_\_\_\_ effect.

- (1) Compliance
- (2) Conformity
- (3) Obedience
- (4) Bandwagon

**Options :**

212807112581. 1  
 212807112582. 2  
 212807112583. 3  
 212807112584. 4

**Question Number : 86 Question Id : 21280728146 Question Type : MCQ Option Shuffling : No Is Question Mandatory : No Calculator : None Response Time : N.A Think Time : N.A Minimum Instruction Time : 0**

**Correct Marks : 5 Wrong Marks : 1**

**Question Key Details :**

Key	Value
Comprehension	MCQ

एक जैसे विचारों वाले लोगों की संगत में जब जनता हमारे विचारों का पक्ष लेती है और सत्यापित करती है तो यह \_\_\_\_\_ प्रकार का प्रभाव है।

- (1) अनुपालन  
 (2) अनुरूपता  
 (3) आज्ञापालन  
 (4) बैडवैगन

**Options :**

212807112581. 1  
 212807112582. 2  
 212807112583. 3  
 212807112584. 4

**Question Number : 87 Question Id : 21280728147 Question Type : MCQ Option Shuffling : No Is Question Mandatory : No Calculator : None Response Time : N.A Think Time : N.A Minimum Instruction Time : 0**

**Correct Marks : 5 Wrong Marks : 1**

**Question Key Details :**

Key	Value
Comprehension	MCQ

The goal of reducing prejudice can be accomplished by :

- (A) Correcting stereotypes related to specific target group  
 (B) Highlighting group identity  
 (C) Tackling problem of a strong in-group bias  
 (D) Increasing intergroup contact  
 (E) Not highlighting individual identity

Choose the **correct** answer from the options given below :

- (1) (A), (C), (D) Only  
 (2) (B), (D), (E) Only  
 (3) (E), (C), (D) Only  
 (4) (A), (B), (C) Only

**Options :**

212807112585. 1  
 212807112586. 2  
 212807112587. 3  
 212807112588. 4

**Question Number : 87 Question Id : 21280728147 Question Type : MCQ Option Shuffling : No Is Question Mandatory : No Calculator : None Response Time : N.A Think Time : N.A Minimum Instruction Time : 0**

**Correct Marks : 5 Wrong Marks : 1**

**Question Key Details :**

Key	Value
Comprehension	MCQ

पूर्वाग्रह कम करने का लक्ष्य निम्नलिखित विधियों द्वारा पूर्ण किया जा सकता है :

- (A) विशिष्ट लक्षित समूह से संबंधित रूढ़ियों को सही करके
- (B) समूह पहचान को उजागर करके
- (C) मजबूत अंतःसमूह पक्षपात की समस्या का मुकाबला करके
- (D) अंतर्समूह संपर्क बढ़ाकर
- (E) व्यक्तिगत पहचान को नहीं उजागर करके

नीचे दिए गए विकल्पों में से सही उत्तर का चयन कीजिए :

- (1) केवल (A), (C), (D)
- (2) केवल (B), (D), (E)
- (3) केवल (E), (C), (D)
- (4) केवल (A), (B), (C)

**Options :**

- 212807112585. 1
- 212807112586. 2
- 212807112587. 3
- 212807112588. 4

**Question Number : 88 Question Id : 21280728148 Question Type : MCQ Option Shuffling : No Is Question Mandatory : No Calculator : None Response Time : N.A Think Time : N.A Minimum Instruction Time : 0**

**Correct Marks : 5 Wrong Marks : 1**

**Question Key Details :**

Key	Value
Comprehension	MCQ

The characteristics of noise which does not effect task performance is :

- (1) Intensity
- (2) Predictability
- (3) Controllability
- (4) Exposure to Information

**Options :**

- 212807112589. 1
- 212807112590. 2
- 212807112591. 3
- 212807112592. 4

**Question Number : 88 Question Id : 21280728148 Question Type : MCQ Option Shuffling : No Is Question Mandatory : No Calculator : None Response Time : N.A Think Time : N.A Minimum Instruction Time : 0**

**Correct Marks : 5 Wrong Marks : 1**

**Question Key Details :**

Key	Value
Comprehension	MCQ

कार्य निष्पादन को प्रभावित न करने वाले शोर के लक्षण है :

- (1) तीव्रता
- (2) भविष्यकथनीयता
- (3) नियंत्रणीयता
- (4) सूचना के प्रति एक्सपोजर

**Options :**

212807112589. 1

212807112590. 2

212807112591. 3

212807112592. 4

**Question Number : 89 Question Id : 21280728149 Question Type : MCQ Option Shuffling : No Is Question Mandatory : No Calculator : None Response Time : N.A Think Time : N.A Minimum Instruction Time : 0**

**Correct Marks : 5 Wrong Marks : 1**

**Question Key Details :**

Key	Value
Comprehension	MCQ

**Match List - I with List - II.**

**List - I**

(A) Psychological issues pertaining to human environment interaction

(B) Study of relation between living beings and environment

(C) All that is around us

(D) Built environment

**List - II**

(I) Environmental design

(II) Ecology

(III) Environment

(IV) Environmental Psychology

Choose the **correct** answer from the options given below :

(1) (A)-(II), (B)-(I), (C)-(III), (D)-(IV)

(2) (A)-(IV), (B)-(II), (C)-(III), (D)-(I)

(3) (A)-(III), (B)-(IV), (C)-(I), (D)-(II)

(4) (A)-(IV), (B)-(III), (C)-(II), (D)-(I)

**Options :**

212807112593. 1

212807112594. 2

212807112595. 3

212807112596. 4

**Question Number : 89 Question Id : 21280728149 Question Type : MCQ Option Shuffling : No Is Question Mandatory : No Calculator : None Response Time : N.A Think Time : N.A Minimum Instruction Time : 0**

**Correct Marks : 5 Wrong Marks : 1**

**Question Key Details :**

Key	Value
Comprehension	MCQ

सूची-I से सूची-II का मिलान कीजिए :

**सूची-I**

- (A) मानव पर्यावरण अंतःक्रिया से संबंधित मनोवैज्ञानिक मुद्दे
- (B) सजीवों और पर्यावरण के मध्य संबंध का अध्ययन
- (C) वह सब जो हमारे चारों ओर है
- (D) निर्मित पर्यावरण

**सूची-II**

- (I) पर्यावरणीय अभिकल्पता
- (II) पारिस्थितिकी
- (III) पर्यावरण
- (IV) पर्यावरणीय मनोविज्ञान

नीचे दिए गए विकल्पों में से सही उत्तर का चयन कीजिए :

- (1) (A)-(II), (B)-(I), (C)-(III), (D)-(IV)
- (2) (A)-(IV), (B)-(II), (C)-(III), (D)-(I)
- (3) (A)-(III), (B)-(IV), (C)-(I), (D)-(II)
- (4) (A)-(IV), (B)-(III), (C)-(II), (D)-(I)

**Options :**

212807112593. 1

212807112594. 2

212807112595. 3

212807112596. 4

**Question Number : 90 Question Id : 21280728150 Question Type : MCQ Option Shuffling : No Is Question Mandatory : No Calculator : None Response Time : N.A Think Time : N.A Minimum Instruction Time : 0**

**Correct Marks : 5 Wrong Marks : 1**

**Question Key Details :**

Key	Value
Comprehension	MCQ

What is **not** required for a psychological test ?

- (1) It should be reliable
- (2) It must be valid
- (3) It must be developed by some renowned personality
- (4) It must have norms

**Options :**

212807112597. 1

212807112598. 2

212807112599. 3

212807112600. 4

**Question Number : 90 Question Id : 21280728150 Question Type : MCQ Option Shuffling : No Is Question Mandatory : No Calculator : None Response Time : N.A Think Time : N.A Minimum Instruction Time : 0**

**Correct Marks : 5 Wrong Marks : 1**

**Question Key Details :**

Key	Value
Comprehension	MCQ

मनोवैज्ञानिक परीक्षण में क्या आवश्यक नहीं होता है ?

- (1) यह विश्वसनीय होना चाहिए
- (2) यह वैध हो
- (3) यह किसी ख्यातिप्राप्त व्यक्ति ने विकसित किया हो
- (4) इसके मानक हों

**Options :**

212807112597. 1  
212807112598. 2  
212807112599. 3  
212807112600. 4

**Sub-Section Number :** 2  
**Sub-Section Id :** 2128072055  
**Question Shuffling Allowed :** No  
**Is Section Default? :** null

**Question Number : 91 Question Id : 21280728151 Question Type : MCQ Option Shuffling : No Is Question Mandatory : No Calculator : None  
Response Time : N.A Think Time : N.A Minimum Instruction Time : 0  
Correct Marks : 5 Wrong Marks : 1  
Question Key Details :**

Key	Value
Comprehension	Comp1

**Read the given case-study carefully and answer the question that follow**

According to Lazarus and his colleagues, people have a tendency to appraise any situation as positive, negative or neutral. When Vikram lost his job as event manager, he perceived the situation as negative but he didn't lose heart and decided to start a food joint as he was handling similar projects in the past. Whereas Vikas who also lost his job as a marketing manager, started feeling helpless and hopeless and consumed alcohol regularly. He started coming up with excuses for not doing anything. He could not even think of starting his own venture as he had no money to invest. He would often become very angry or would start crying bitterly.

According to Cognitive Appraisal Theory of Stress, psychological characteristics that effect stress appraisal are :

- (A) Mental health
- (B) Physical health
- (C) Temperament
- (D) Expected response style
- (E) Self concept

Choose the **correct** answer from the options given below :

- (1) (A), (B), (D) Only
- (2) (A), (C), (E) Only
- (3) (B), (C), (E) Only
- (4) (B), (D), (E) Only

**Options :**  
212807112601. 1  
212807112602. 2  
212807112603. 3  
212807112604. 4

**Question Number : 91 Question Id : 21280728151 Question Type : MCQ Option Shuffling : No Is Question Mandatory : No Calculator : None  
Response Time : N.A Think Time : N.A Minimum Instruction Time : 0  
Correct Marks : 5 Wrong Marks : 1  
Question Key Details :**

Key	Value
Comprehension	Comp1



दी गई केस स्टडी को ध्यानपूर्वक पढ़ें और नीचे दिए गए प्रश्न का उत्तर दें :

लेज़ारस और उसके साथियों के अनुसार लोगों में हर स्थिति को सकारात्मक, नकारात्मक या उदासीन के रूप में आंकने की प्रवृत्ति होती है। जब विक्रम ने इवेंट मैनेजर की अपनी नौकरी खोई तो उसने इस स्थिति को नकारात्मक आंका लेकिन वह निराश नहीं हुआ और उसने एक फूड जॉइंट प्रारंभ करने का निर्णय लिया, क्योंकि वह पूर्व में इसी तरह की परियोजनाएँ संभालता था। जबकि विकास जिसने भी मार्केटिंग मैनेजर की अपनी नौकरी खोई थी, उसने असहाय और निराश महसूस करना आरंभ कर दिया तथा लगातार शराब का सेवन करने लगा। वह कुछ नहीं करने के लिए बहाने गिनाने लगा। वह अपना उद्यम शुरू करने के बारे में सोच भी नहीं सकता था क्योंकि निवेश के लिए उसके पास पैसे नहीं थे। वह प्रायः बहुत गुस्सा करता था या बहुत और से रोना शुरू कर देता था।

तनाव के संज्ञानात्मक मूल्यांकन सिद्धांत के अनुसार तनाव के मूल्यांकन को प्रभावित करने वाले मनोवैज्ञानिक अभिलक्षण कौनसे हैं ?

- (A) मानसिक स्वास्थ्य
- (B) शारीरिक स्वास्थ्य
- (C) स्वाभाव
- (D) प्रत्याशित अनुक्रिया शैली
- (E) आत्म अवधारणा

नीचे दिए गए विकल्पों में से सही उत्तर का चयन कीजिए :

- (1) केवल (A), (B), (D)
- (2) केवल (A), (C), (E)
- (3) केवल (B), (C), (E)
- (4) केवल (B), (D), (E)

Options :

- 212807112601. 1
- 212807112602. 2
- 212807112603. 3
- 212807112604. 4

Question Number : 92 Question Id : 21280728152 Question Type : MCQ Option Shuffling : No Is Question Mandatory : No Calculator : None Response Time : N.A Think Time : N.A Minimum Instruction Time : 0

Correct Marks : 5 Wrong Marks : 1

Question Key Details :

Key	Value
Comprehension	Comp1

**Read the given case-study carefully and answer the question that follow**

According to Lazarus and his colleagues, people have a tendency to appraise any situation as positive, negative or neutral. When Vikram lost his job as event manager, he perceived the situation as negative but he didn't lose heart and decided to start a food joint as he was handling similar projects in the past. Whereas Vikas who also lost his job as a marketing manager, started feeling helpless and hopeless and consumed alcohol regularly. He started coming up with excuses for not doing anything. He could not even think of starting his own venture as he had no money to invest. He would often become very angry or would start crying bitterly.

According to above case study, Vikas's feeling of worthlessness and hopelessness, as a reaction to stress is in the form of :

- (1) Physiological response
- (2) Behavioural response
- (3) Emotional response
- (4) Cognitive response

**Options :**

212807112605. 1  
212807112606. 2  
212807112607. 3  
212807112608. 4

**Question Number : 92 Question Id : 21280728152 Question Type : MCQ Option Shuffling : No Is Question Mandatory : No Calculator : None Response Time : N.A Think Time : N.A Minimum Instruction Time : 0**

**Correct Marks : 5 Wrong Marks : 1**

**Question Key Details :**

Key	Value
Comprehension	Compl

**दी गई केस स्टडी को ध्यानपूर्वक पढ़ें और नीचे दिए गए प्रश्न का उत्तर दें :**

लेज़ारस और उसके साथियों के अनुसार लोगों में हर स्थिति को सकारात्मक, नकारात्मक या उदासीन के रूप में आंकने की प्रवृत्ति होती है। जब विक्रम ने इवेंट मैनेजर की अपनी नौकरी खोई तो उसने इस स्थिति को नकारात्मक आंका लेकिन वह निराश नहीं हुआ और उसने एक फूड जॉइंट प्रारंभ करने का निर्णय लिया, क्योंकि वह पूर्व में इसी तरह की परियोजनाएँ संभालता था। जबकि विकास जिसने भी मार्केटिंग मैनेजर की अपनी नौकरी खोई थी, उसने असहाय और निराश महसूस करना आरंभ कर दिया तथा लगातार शराब का सेवन करने लगा। वह कुछ नहीं करने के लिए बहाने गिनाने लगा। वह अपना उद्यम शुरू करने के बारे में सोच भी नहीं सकता था क्योंकि निवेश के लिए उसके पास पैसे नहीं थे। वह प्रायः बहुत गुस्सा करता था या बहुत और से रोना शुरू कर देता था।

उपरोक्त केस स्टडी के अनुसार, विकास की निम्नलिखित तनाव की प्रतिक्रिया के रूप में है :

- (1) शरीरक्रियात्मक अनुक्रिया
- (2) व्यवहारात्मक अनुक्रिया
- (3) सांवेगिक अनुक्रिया
- (4) संज्ञानात्मक अनुक्रिया

**Options :**

212807112605. 1  
212807112606. 2  
212807112607. 3  
212807112608. 4

Question Number : 93 Question Id : 21280728153 Question Type : MCQ Option Shuffling : No Is Question Mandatory : No Calculator : None  
Response Time : N.A Think Time : N.A Minimum Instruction Time : 0

Correct Marks : 5 Wrong Marks : 1

Question Key Details :

Key	Value
Comprehension	Comp1

**Read the given case-study carefully and answer the question that follow**

According to Lazarus and his colleagues, people have a tendency to appraise any situation as positive, negative or neutral. When Vikram lost his job as event manager, he perceived the situation as negative but he didn't lose heart and decided to start a food joint as he was handling similar projects in the past. Whereas Vikas who also lost his job as a marketing manager, started feeling helpless and hopeless and consumed alcohol regularly. He started coming up with excuses for not doing anything. He could not even think of starting his own venture as he had no money to invest. He would often become very angry or would start crying bitterly.

According to cognitive theory of stress, primary appraisal refers to the perception of new environment as :

- (1) Positive, Negative, Neutral
- (2) Harm, threat and challenge
- (3) Intensity, duration and predictability
- (4) Past experience and controllability

Options :

212807112609. 1

212807112610. 2

212807112611. 3

212807112612. 4

Question Number : 93 Question Id : 21280728153 Question Type : MCQ Option Shuffling : No Is Question Mandatory : No Calculator : None  
Response Time : N.A Think Time : N.A Minimum Instruction Time : 0

Correct Marks : 5 Wrong Marks : 1

Question Key Details :

Key	Value
Comprehension	Comp1

दी गई केस स्टडी को ध्यानपूर्वक पढ़ें और नीचे दिए गए प्रश्न का उत्तर दें :

लेज़ारस और उसके साथियों के अनुसार लोगों में हर स्थिति को सकारात्मक, नकारात्मक या उदासीन के रूप में आंकने की प्रवृत्ति होती है। जब विक्रम ने इवेंट मैनेजर की अपनी नौकरी खोई तो उसने इस स्थिति को नकारात्मक आंका लेकिन वह निराश नहीं हुआ और उसने एक फूड जॉइंट प्रारंभ करने का निर्णय लिया, क्योंकि वह पूर्व में इसी तरह की परियोजनाएँ संभालता था। जबकि विकास जिसने भी मार्केटिंग मैनेजर की अपनी नौकरी खोई थी, उसने असहाय और निराश महसूस करना आरंभ कर दिया तथा लगातार शराब का सेवन करने लगा। वह कुछ नहीं करने के लिए बहाने गिनाने लगा। वह अपना उद्यम शुरू करने के बारे में सोच भी नहीं सकता था क्योंकि निवेश के लिए उसके पास पैसे नहीं थे। वह प्रायः बहुत गुस्सा करता था या बहुत और से रोना शुरू कर देता था।

तनाव के संज्ञानात्मक सिद्धांत के अनुसार प्राथमिक मूल्यांकन नए पर्यावरण का बोध किस रूप में उल्लिखित करता है ?

- (1) सकारात्मक, नकारात्मक, उदासीन
- (2) नुकसान, खतरा और चुनौती
- (3) तीव्रता, अवधि और भविष्यकथनीयता
- (4) पूर्व अनुभव और नियंत्रणीयता

Options :

212807112609. 1  
212807112610. 2  
212807112611. 3  
212807112612. 4

Question Number : 94 Question Id : 21280728154 Question Type : MCQ Option Shuffling : No Is Question Mandatory : No Calculator : None Response Time : N.A Think Time : N.A Minimum Instruction Time : 0

Correct Marks : 5 Wrong Marks : 1

Question Key Details :

Key	Value
Comprehension	Comp1

**Read the given case-study carefully and answer the question that follow**

According to Lazarus and his colleagues, people have a tendency to appraise any situation as positive, negative or neutral. When Vikram lost his job as event manager, he perceived the situation as negative but he didn't lose heart and decided to start a food joint as he was handling similar projects in the past. Whereas Vikas who also lost his job as a marketing manager, started feeling helpless and hopeless and consumed alcohol regularly. He started coming up with excuses for not doing anything. He could not even think of starting his own venture as he had no money to invest. He would often become very angry or would start crying bitterly.

In the above case study, Vikram was able to take a decision of starting his own venture on the basis of :

- (1) Intensity of problem
- (2) Complexity of problem
- (3) Past experience
- (4) Controllability

Options :

212807112613. 1  
212807112614. 2  
212807112615. 3  
212807112616. 4

Question Number : 94 Question Id : 21280728154 Question Type : MCQ Option Shuffling : No Is Question Mandatory : No Calculator : None  
Response Time : N.A Think Time : N.A Minimum Instruction Time : 0

Correct Marks : 5 Wrong Marks : 1

Question Key Details :

Key	Value
Comprehension	Comp1

दी गई केस स्टडी को ध्यानपूर्वक पढ़ें और नीचे दिए गए प्रश्न का उत्तर दें :

लेज़ारस और उसके साथियों के अनुसार लोगों में हर स्थिति को सकारात्मक, नकारात्मक या उदासीन के रूप में आंकने की प्रवृत्ति होती है। जब विक्रम ने इवेंट मैनेजर की अपनी नौकरी खोई तो उसने इस स्थिति को नकारात्मक आंका लेकिन वह निराश नहीं हुआ और उसने एक फूड जॉइंट प्रारंभ करने का निर्णय लिया, क्योंकि वह पूर्व में इसी तरह की परियोजनाएँ संभालता था। जबकि विकास जिसने भी मार्केटिंग मैनेजर की अपनी नौकरी खोई थी, उसने असहाय और निराश महसूस करना आरंभ कर दिया तथा लगातार शराब का सेवन करने लगा। वह कुछ नहीं करने के लिए बहाने गिनाने लगा। वह अपना उद्यम शुरू करने के बारे में सोच भी नहीं सकता था क्योंकि निवेश के लिए उसके पास पैसे नहीं थे। वह प्रायः बहुत गुस्सा करता था या बहुत और से रोना शुरू कर देता था।

उपरोक्त केस स्टडी में निम्नलिखित में से किसके आधार पर विक्रम अपना स्वयं का उद्यम आरंभ करने का निर्णय लेने में सक्षम था :

- (1) समस्या की तीव्रता
- (2) समस्या की जटिलता
- (3) पूर्व अनुभव
- (4) नियंत्रणीयता

Options :

212807112613. 1  
212807112614. 2  
212807112615. 3  
212807112616. 4

Question Number : 95 Question Id : 21280728155 Question Type : MCQ Option Shuffling : No Is Question Mandatory : No Calculator : None  
Response Time : N.A Think Time : N.A Minimum Instruction Time : 0

Correct Marks : 5 Wrong Marks : 1

Question Key Details :

Key	Value
Comprehension	Comp1

**Read the given case-study carefully and answer the question that follow**

According to Lazarus and his colleagues, people have a tendency to appraise any situation as positive, negative or neutral. When Vikram lost his job as event manager, he perceived the situation as negative but he didn't lose heart and decided to start a food joint as he was handling similar projects in the past. Whereas Vikas who also lost his job as a marketing manager, started feeling helpless and hopeless and consumed alcohol regularly. He started coming up with excuses for not doing anything. He could not even think of starting his own venture as he had no money to invest. He would often become very angry or would start crying bitterly.

**Match List - I with List - II.**

**List - I**

- (A) Emotional effect of stress
- (B) Physiological effect of stress
- (C) Cognitive effect of stress
- (D) Behavioural effect of stress

**List - II**

- (I) Production of adrenaline and cortisol hormones
- (II) Poor concentration, reduced short term memory capacity
- (III) Mood swings
- (IV) Increased consumption of alcohol

Choose the **correct** answer from the options given below :

- (1) (A)-(III), (B)-(I), (C)-(II), (D)-(IV)
- (2) (A)-(IV), (B)-(II), (C)-(I), (D)-(III)
- (3) (A)-(I), (B)-(IV), (C)-(II), (D)-(III)
- (4) (A)-(IV), (B)-(I), (C)-(II), (D)-(III)

**Options :**

- 212807112617. 1
- 212807112618. 2
- 212807112619. 3
- 212807112620. 4

**Question Number : 95 Question Id : 21280728155 Question Type : MCQ Option Shuffling : No Is Question Mandatory : No Calculator : None Response Time : N.A Think Time : N.A Minimum Instruction Time : 0**

**Correct Marks : 5 Wrong Marks : 1**

**Question Key Details :**

Key	Value
Comprehension	Comp1

दी गई केस स्टडी को ध्यानपूर्वक पढ़ें और नीचे दिए गए प्रश्न का उत्तर दें :

लेज़ारस और उसके साथियों के अनुसार लोगों में हर स्थिति को सकारात्मक, नकारात्मक या उदासीन के रूप में आंकने की प्रवृत्ति होती है। जब विक्रम ने इवेंट मैनेजर की अपनी नौकरी खोई तो उसने इस स्थिति को नकारात्मक आंका लेकिन वह निराश नहीं हुआ और उसने एक फूड जॉइंट प्रारंभ करने का निर्णय लिया, क्योंकि वह पूर्व में इसी तरह की परियोजनाएँ संभालता था। जबकि विकास जिसने भी मार्केटिंग मैनेजर की अपनी नौकरी खोई थी, उसने असहाय और निराश महसूस करना आरंभ कर दिया तथा लगातार शराब का सेवन करने लगा। वह कुछ नहीं करने के लिए बहाने गिनाने लगा। वह अपना उद्यम शुरू करने के बारे में सोच भी नहीं सकता था क्योंकि निवेश के लिए उसके पास पैसे नहीं थे। वह प्रायः बहुत गुस्सा करता था या बहुत और से रोना शुरू कर देता था।

सूची-I से सूची-II का मिलान कीजिए :

सूची-I

सूची-II

- |                                   |  |
|-----------------------------------|--|
| (A) तनाव का सांवेगिक प्रभाव       | (I) एड्रेलिन और कॉर्टिसॉल हार्मोन का उत्पादन         |
| (B) तनाव का शरीरक्रियात्मक प्रभाव | (II) खराब एकाग्रता, अल्प अवधि यादाश्त क्षमता में कमी |
| (C) तनाव का संज्ञानात्मक प्रभाव   | (III) मनोदशा में जल्दी जल्दी परिवर्तन (मूड स्विंग्स) |
| (D) तनाव का व्यवहारात्मक प्रभाव   | (IV) एल्कोहल का सेवन बढ़ना                           |

नीचे दिए गए विकल्पों में से सही उत्तर का चयन कीजिए :

- (1) (A)-(III), (B)-(I), (C)-(II), (D)-(IV)
- (2) (A)-(IV), (B)-(II), (C)-(I), (D)-(III)
- (3) (A)-(I), (B)-(IV), (C)-(II), (D)-(III)
- (4) (A)-(IV), (B)-(I), (C)-(II), (D)-(III)

Options :

212807112617. 1
212807112618. 2
212807112619. 3
212807112620. 4

Sub-Section Number :	3
Sub-Section Id :	2128072056
Question Shuffling Allowed :	No
Is Section Default? :	null

Question Number : 96 Question Id : 21280728156 Question Type : MCQ Option Shuffling : No Is Question Mandatory : No Calculator : None Response Time : N.A Think Time : N.A Minimum Instruction Time : 0

Correct Marks : 5 Wrong Marks : 1

Question Key Details :

Key	Value
Comprehension	Comp2

**Read the passage and answer the question that follow :**

Namita is studying in London. Being an Indian she faces a variety of discriminatory behavior on an everyday basis. For instance, Namita had an Economics examination in the morning. While she was revising her notes outside the exam hall one of her classmates, Jessica commented that, "You are from a country of snake charmers, I do not think advanced Economics concepts are your cup of tea". Namita felt bad and started to think it over. Although she was prepared well for her exam but due to nervousness, she was not able to perform well in the exam and failed. Seeing her result, other students started to call her "Know Nothing Namita". Some students started bullying other Indian students also without provocation. This instance lead the students of other nationalities to believe that there must be some truth in what everyone says about Indians.

The belief that 'India is a country of snake charmers' is an example of :

- (1) In congruent attitude
- (2) Discrimination
- (3) Scapegoating
- (4) Stereotyping

**Options :**

212807112621. 1  
212807112622. 2  
212807112623. 3  
212807112624. 4

**Question Number : 96 Question Id : 21280728156 Question Type : MCQ Option Shuffling : No Is Question Mandatory : No Calculator : None Response Time : N.A Think Time : N.A Minimum Instruction Time : 0**

**Correct Marks : 5 Wrong Marks : 1**

**Question Key Details :**

Key	Value
Comprehension	Comp2

**अनुच्छेद को पढ़े और नीचे दिए गए प्रश्न का उत्तर दें :**

नमिता लंदन में पढ़ रही है। भारतीय होने के कारण वह हर दिन विभिन्न तरह के भेदभावपूर्ण व्यवहार का सामना करती है। उदाहरण के लिए, नमिता की सुबह अर्थशास्त्र की परीक्षा थी। जब वह परीक्षा कक्ष के बाहर अपने नोट्स दोहरा रही थी तो उसकी सहपाठी जेसिका ने टिप्पणी की कि, "तुम सपेरो के देश से हो, मुझे नहीं लगता कि उच्च अर्थशास्त्र की अवधारणाएं तुम्हारे बस की बात है।" नमिता को बुरा लगा और वह इस बारे में सोचने लगी। यद्यपि वह परीक्षा के लिए पूरी तरह से तैयार थी लेकिन घबराहट की वजह से वह परीक्षा में अच्छा प्रदर्शन नहीं कर पाई और फेल हो गई। उसका परिणाम देखकर अन्य विद्यार्थियों ने उसे "कुछ नहीं जानती नमिता" कहना शुरू कर दिया। कुछ विद्यार्थियों ने बिना किसी उकसावे के अन्य भारतीय विद्यार्थियों को तंग करना शुरू कर दिया। इस घटना के बाद अन्य देशों के विद्यार्थियों ने विश्वास करना शुरू कर दिया कि भारतीयों के बारे में सब जो कहते हैं उसमें कुछ सच्चाई है।

**'भारत एक सपेरो का देश है', यह मानना किसका एक उदाहरण है ?**

- (1) विसंगत अभिवृत्ति
- (2) भेदभाव
- (3) बलि का बकरा बनाना
- (4) रूढ़िवादिता

**Options :**

212807112621. 1  
212807112622. 2



212807112623. 3  
212807112624. 4

**Question Number : 97 Question Id : 21280728157 Question Type : MCQ Option Shuffling : No Is Question Mandatory : No Calculator : None  
Response Time : N.A Think Time : N.A Minimum Instruction Time : 0  
Correct Marks : 5 Wrong Marks : 1**

**Question Key Details :**

Key	Value
Comprehension	Comp2

**Read the passage and answer the question that follow :**

Namita is studying in London. Being an Indian she faces a variety of discriminatory behavior on an everyday basis. For instance, Namita had an Economics examination in the morning. While she was revising her notes outside the exam hall one of her classmates, Jessica commented that, "You are from a country of snake charmers, I do not think advanced Economics concepts are your cup of tea". Namita felt bad and started to think it over. Although she was prepared well for her exam but due to nervousness, she was not able to perform well in the exam and failed. Seeing her result, other students started to call her "Know Nothing Namita". Some students started bullying other Indian students also without provocation. This instance lead the students of other nationalities to believe that there must be some truth in what everyone says about Indians.

Prejudice may also get translated into \_\_\_\_\_, the behavioural component.

- (1) Stereotype
- (2) Discrimination
- (3) Hatred or dislike
- (4) Pro-social behaviour

**Options :**

212807112625. 1  
212807112626. 2  
212807112627. 3  
212807112628. 4

**Question Number : 97 Question Id : 21280728157 Question Type : MCQ Option Shuffling : No Is Question Mandatory : No Calculator : None  
Response Time : N.A Think Time : N.A Minimum Instruction Time : 0  
Correct Marks : 5 Wrong Marks : 1**

**Question Key Details :**

Key	Value
Comprehension	Comp2

### अनुच्छेद को पढ़े और नीचे दिए गए प्रश्न का उत्तर दें :

नमिता लंदन में पढ़ रही है। भारतीय होने के कारण वह हर दिन विभिन्न तरह के भेदभावपूर्ण व्यवहार का सामना करती है। उदाहरण के लिए, नमिता की सुबह अर्थशास्त्र की परीक्षा थी। जब वह परीक्षा कक्ष के बाहर अपने नोट्स दोहरा रही थी तो उसकी सहपाठी जेसिका ने टिप्पणी की कि, “तुम सपेरो के देश से हो, मुझे नहीं लगता कि उच्च अर्थशास्त्र की अवधारणाएं तुम्हारे बस की बात है।” नमिता को बुरा लगा और वह इस बारे में सोचने लगी। यद्यपि वह परीक्षा के लिए पूरी तरह से तैयार थी लेकिन घबराहट की वजह से वह परीक्षा में अच्छा प्रदर्शन नहीं कर पाई और फेल हो गई। उसका परिणाम देखकर अन्य विद्यार्थियों ने उसे “कुछ नहीं जानती नमिता” कहना शुरू कर दिया। कुछ विद्यार्थियों ने बिना किसी उकसावे के अन्य भारतीय विद्यार्थियों को तंग करना शुरू कर दिया। इस घटना के बाद अन्य देशों के विद्यार्थियों ने विश्वास करना शुरू कर दिया कि भारतीयों के बारे में सब जो कहते हैं उसमें कुछ सच्चाई है।

पूर्वाग्रह व्यवहारात्मक घटक, \_\_\_\_\_ में भी परिवर्तित हो सकता है।

- (1) रूढ़िवादिता
- (2) भेदभाव
- (3) घृणा या नापसंदगी
- (4) समाज अनुकूल व्यवहार

#### Options :

212807112625. 1  
212807112626. 2  
212807112627. 3  
212807112628. 4

Question Number : 98 Question Id : 21280728158 Question Type : MCQ Option Shuffling : No Is Question Mandatory : No Calculator : None  
Response Time : N.A Think Time : N.A Minimum Instruction Time : 0

Correct Marks : 5 Wrong Marks : 1

#### Question Key Details :

Key	Value
Comprehension	Comp2

### Read the passage and answer the question that follow :

Namita is studying in London. Being an Indian she faces a variety of discriminatory behavior on an everyday basis. For instance, Namita had an Economics examination in the morning. While she was revising her notes outside the exam hall one of her classmates, Jessica commented that, “You are from a country of snake charmers, I do not think advanced Economics concepts are your cup of tea”. Namita felt bad and started to think it over. Although she was prepared well for her exam but due to nervousness, she was not able to perform well in the exam and failed. Seeing her result, other students started to call her “Know Nothing Namita’. Some students started bullying other Indian students also without provocation. This instance lead the students of other nationalities to believe that there must be some truth in what everyone says about Indians.

How can Jessica’s attitude towards Indians be changed ?

- (1) By punishing Jessica
- (2) By telling other students that Jessica is a bad girl
- (3) Increasing intergroup contact
- (4) By forcing Namita to work hard in her studies

#### Options :

212807112629. 1  
212807112630. 2

212807112631. 3  
212807112632. 4

Question Number : 98 Question Id : 21280728158 Question Type : MCQ Option Shuffling : No Is Question Mandatory : No Calculator : None  
Response Time : N.A Think Time : N.A Minimum Instruction Time : 0  
Correct Marks : 5 Wrong Marks : 1

Question Key Details :

Key	Value
Comprehension	Comp2

**अनुच्छेद को पढ़े और नीचे दिए गए प्रश्न का उत्तर दें :**

नमिता लंदन में पढ़ रही है। भारतीय होने के कारण वह हर दिन विभिन्न तरह के भेदभावपूर्ण व्यवहार का सामना करती है। उदाहरण के लिए, नमिता की सुबह अर्थशास्त्र की परीक्षा थी। जब वह परीक्षा कक्ष के बाहर अपने नोट्स दोहरा रही थी तो उसकी सहपाठी जेसिका ने टिप्पणी की कि, “तुम सपेरो के देश से हो, मुझे नहीं लगता कि उच्च अर्थशास्त्र की अवधारणाएं तुम्हारे बस की बात है।” नमिता को बुरा लगा और वह इस बारे में सोचने लगी। यद्यपि वह परीक्षा के लिए पूरी तरह से तैयार थी लेकिन घबराहट की वजह से वह परीक्षा में अच्छा प्रदर्शन नहीं कर पाई और फेल हो गई। उसका परिणाम देखकर अन्य विद्यार्थियों ने उसे “कुछ नहीं जानती नमिता” कहना शुरू कर दिया। कुछ विद्यार्थियों ने बिना किसी उकसावे के अन्य भारतीय विद्यार्थियों को तंग करना शुरू कर दिया। इस घटना के बाद अन्य देशों के विद्यार्थियों ने विश्वास करना शुरू कर दिया कि भारतीयों के बारे में सब जो कहते हैं उसमें कुछ सच्चाई है।

भारतीयों के प्रति जेसिका की अभिवृत्ति कैसे बदल सकती है ?

- (1) जेसिका को सजा देने से
- (2) अन्य विद्यार्थियों को यह बताने से कि जेसिका बुरी लड़की है
- (3) अतःसमूह संपर्क बढ़ाने से
- (4) नमिता को अपने अध्ययन में कड़ी मेहनत के लिए विवश करने से

Options :

212807112629. 1  
212807112630. 2  
212807112631. 3  
212807112632. 4

Question Number : 99 Question Id : 21280728159 Question Type : MCQ Option Shuffling : No Is Question Mandatory : No Calculator : None  
Response Time : N.A Think Time : N.A Minimum Instruction Time : 0  
Correct Marks : 5 Wrong Marks : 1

Question Key Details :

Key	Value
Comprehension	Comp2

**Read the passage and answer the question that follow :**

Namita is studying in London. Being an Indian she faces a variety of discriminatory behavior on an everyday basis. For instance, Namita had an Economics examination in the morning. While she was revising her notes outside the exam hall one of her classmates, Jessica commented that, "You are from a country of snake charmers, I do not think advanced Economics concepts are your cup of tea". Namita felt bad and started to think it over. Although she was prepared well for her exam but due to nervousness, she was not able to perform well in the exam and failed. Seeing her result, other students started to call her "Know Nothing Namita". Some students started bullying other Indian students also without provocation. This instance lead the students of other nationalities to believe that there must be some truth in what everyone says about Indians.

In the above passage, Namita failed due to nervousness arising from Jessica's comment, thus strengthening the existing prejudice. This is an example of \_\_\_\_\_.

- (1) Kernel of truth
- (2) Self-fulfilling
- (3) Scapegoating
- (4) Diffusion of responsibility

**Options :**

212807112633. 1

212807112634. 2

212807112635. 3

212807112636. 4

**Question Number : 99 Question Id : 21280728159 Question Type : MCQ Option Shuffling : No Is Question Mandatory : No Calculator : None Response Time : N.A Think Time : N.A Minimum Instruction Time : 0**

**Correct Marks : 5 Wrong Marks : 1**

**Question Key Details :**

Key	Value
Comprehension	Comp2

**अनुच्छेद को पढ़े और नीचे दिए गए प्रश्न का उत्तर दें :**

नमिता लंदन में पढ़ रही है। भारतीय होने के कारण वह हर दिन विभिन्न तरह के भेदभावपूर्ण व्यवहार का सामना करती है। उदाहरण के लिए, नमिता की सुबह अर्थशास्त्र की परीक्षा थी। जब वह परीक्षा कक्ष के बाहर अपने नोट्स दोहरा रही थी तो उसकी सहपाठी जेसिका ने टिप्पणी की कि, "तुम सपेरो के देश से हो, मुझे नहीं लगता कि उच्च अर्थशास्त्र की अवधारणाएं तुम्हारे बस की बात है।" नमिता को बुरा लगा और वह इस बारे में सोचने लगी। यद्यपि वह परीक्षा के लिए पूरी तरह से तैयार थी लेकिन घबराहट की वजह से वह परीक्षा में अच्छा प्रदर्शन नहीं कर पाई और फेल हो गई। उसका परिणाम देखकर अन्य विद्यार्थियों ने उसे "कुछ नहीं जानती नमिता" कहना शुरू कर दिया। कुछ विद्यार्थियों ने बिना किसी उकसावे के अन्य भारतीय विद्यार्थियों को तंग करना शुरू कर दिया। इस घटना के बाद अन्य देशों के विद्यार्थियों ने विश्वास करना शुरू कर दिया कि भारतीयों के बारे में सब जो कहते हैं उसमें कुछ सच्चाई है।

उपरोक्त गद्यांश में जेसिका की टिप्पणी से उत्पन्न हुई घबराहट की वजह से नमिता फेल हुई, जो पहले से मौजूद पूर्वाग्रह को मजबूत करता है। यह \_\_\_\_\_ का एक उदाहरण है।

- (1) सत्य का आधार तत्व
- (2) स्वतः साधक
- (3) बलि का बकरा बनाना
- (4) जिम्मेदारी का विसरण (फैलाव)

**Options :**

- 212807112633. 1
- 212807112634. 2
- 212807112635. 3
- 212807112636. 4

**Question Number : 100 Question Id : 21280728160 Question Type : MCQ Option Shuffling : No Is Question Mandatory : No Calculator : None Response Time : N.A Think Time : N.A Minimum Instruction Time : 0**

**Correct Marks : 5 Wrong Marks : 1**

**Question Key Details :**

Key	Value
Comprehension	Comp2

**Read the passage and answer the question that follow :**

Namita is studying in London. Being an Indian she faces a variety of discriminatory behavior on an everyday basis. For instance, Namita had an Economics examination in the morning. While she was revising her notes outside the exam hall one of her classmates, Jessica commented that, "You are from a country of snake charmers, I do not think advanced Economics concepts are your cup of tea". Namita felt bad and started to think it over. Although she was prepared well for her exam but due to nervousness, she was not able to perform well in the exam and failed. Seeing her result, other students started to call her "Know Nothing Namita". Some students started bullying other Indian students also without provocation. This instance lead the students of other nationalities to believe that there must be some truth in what everyone says about Indians.

When people continue to hold stereotypes because they think that there must be some truth in what everyone says about the other group, this is called \_\_\_\_\_.

- (1) Scapegoating
- (2) Self-fulfilling prophecy
- (3) Kernel of truth
- (4) Social cognition

**Options :**

- 212807112637. 1
- 212807112638. 2
- 212807112639. 3
- 212807112640. 4

**Question Number : 100 Question Id : 21280728160 Question Type : MCQ Option Shuffling : No Is Question Mandatory : No Calculator : None Response Time : N.A Think Time : N.A Minimum Instruction Time : 0**

**Correct Marks : 5 Wrong Marks : 1**

**Question Key Details :**

Key	Value
Comprehension	Comp2

## अनुच्छेद को पढ़े और नीचे दिए गए प्रश्न का उत्तर दें :

नमिता लंदन में पढ़ रही है। भारतीय होने के कारण वह हर दिन विभिन्न तरह के भेदभावपूर्ण व्यवहार का सामना करती है। उदाहरण के लिए, नमिता की सुबह अर्थशास्त्र की परीक्षा थी। जब वह परीक्षा कक्ष के बाहर अपने नोट्स दोहरा रही थी तो उसकी सहपाठी जेसिका ने टिप्पणी की कि, “तुम सपेरो के देश से हो, मुझे नहीं लगता कि उच्च अर्थशास्त्र की अवधारणाएं तुम्हारे बस की बात है।” नमिता को बुरा लगा और वह इस बारे में सोचने लगी। यद्यपि वह परीक्षा के लिए पूरी तरह से तैयार थी लेकिन घबराहट की वजह से वह परीक्षा में अच्छा प्रदर्शन नहीं कर पाई और फेल हो गई। उसका परिणाम देखकर अन्य विद्यार्थियों ने उसे “कुछ नहीं जानती नमिता” कहना शुरू कर दिया। कुछ विद्यार्थियों ने बिना किसी उकसावे के अन्य भारतीय विद्यार्थियों को तंग करना शुरू कर दिया। इस घटना के बाद अन्य देशों के विद्यार्थियों ने विश्वास करना शुरू कर दिया कि भारतीयों के बारे में सब जो कहते हैं उसमें कुछ सच्चाई है।

लोग रूढ़धारणा रखना जारी रखते हैं क्योंकि वे सोचते हैं कि अन्य समूह के बारे में सब जो कहते हैं उसमें कुछ सत्य है, तो यह क्या कहलाता है ?

- (1) बलि का बकरा बनाना
- (2) स्वतः साधक भविष्योक्ति
- (3) सत्य का आधार तत्व
- (4) सामाजिक संज्ञान

### Options :

212807112637. 1  
212807112638. 2  
212807112639. 3  
212807112640. 4

## General Test

Group Number :	3
Group Id :	212807614
Group Maximum Duration :	60
Group Minimum Duration :	60
Show Attended Group? :	No
Edit Attended Group? :	No
Break time :	0
Group Marks :	250
Is this Group for Examiner? :	No
Examiner permission :	Cant View
Show Progress Bar? :	No

## General Test

Section Id :	212807716
Section Number :	1
Section type :	Online
Mandatory or Optional :	Mandatory
Number of Questions :	60
Number of Questions to be attempted :	50
Section Marks :	250
Enable Mark as Answered Mark for Review and Clear Response :	Yes
Maximum Instruction Time :	0
Sub-Section Number :	1
Sub-Section Id :	2128072057
Question Shuffling Allowed :	Yes
Is Section Default? :	null

Question Number : 101 Question Id : 21280728051 Question Type : MCQ Option Shuffling : No Is Question Mandatory : No Calculator : None  
Response Time : N.A Think Time : N.A Minimum Instruction Time : 0

Correct Marks : 5 Wrong Marks : 1

Question Key Details :

Key	Value
Comprehension	MCQ

A completes  $\frac{7}{20}$  of a work in 10 days. Then he completes the remaining work with the help of B in 5 days. The time required for A and B together to complete the entire work is :

- (1)  $\frac{100}{29}$  days  
(2)  $\frac{100}{13}$  days  
(3)  $\frac{100}{17}$  days  
(4)  $\frac{200}{13}$  days

Options :

212807112201. 1  
212807112202. 2  
212807112203. 3  
212807112204. 4

Question Number : 101 Question Id : 21280728051 Question Type : MCQ Option Shuffling : No Is Question Mandatory : No Calculator : None  
Response Time : N.A Think Time : N.A Minimum Instruction Time : 0

Correct Marks : 5 Wrong Marks : 1

Question Key Details :

Key	Value
Comprehension	MCQ

'A' किसी कार्य के  $\frac{7}{20}$  भाग को 10 दिन में पूरा करता है। फिर वह बचे हुए कार्य को 'B' की सहायता से 5 दिन में पूरा करता है। सारे कार्य को 'A' और 'B' दोनों मिलकर कितने दिन में पूरा करेंगे ?

- (1)  $\frac{100}{29}$  दिन  
(2)  $\frac{100}{13}$  दिन  
(3)  $\frac{100}{17}$  दिन  
(4)  $\frac{200}{13}$  दिन

Options :

212807112201. 1  
212807112202. 2  
212807112203. 3  
212807112204. 4

Question Number : 102 Question Id : 21280728052 Question Type : MCQ Option Shuffling : No Is Question Mandatory : No Calculator : None  
Response Time : N.A Think Time : N.A Minimum Instruction Time : 0

Correct Marks : 5 Wrong Marks : 1

Question Key Details :

Key	Value
Comprehension	MCQ

A trader sold half of his articles at 60% profit, half of the remaining at 20% loss and the rest was sold at the cost price. In total transaction his gain % or loss % will be :

- (1) Gain 20%
- (2) Loss 5%
- (3) Gain 40%
- (4) Gain 25%

Options :

- 212807112205. 1
- 212807112206. 2
- 212807112207. 3
- 212807112208. 4

Question Number : 102 Question Id : 21280728052 Question Type : MCQ Option Shuffling : No Is Question Mandatory : No Calculator : None  
Response Time : N.A Think Time : N.A Minimum Instruction Time : 0

Correct Marks : 5 Wrong Marks : 1

Question Key Details :

Key	Value
Comprehension	MCQ

एक व्यापारी अपनी वस्तुओं के आधे भाग को 60% लाभ पर बेच देता है, बचे हुए सामान के आधे भाग को 20% हानि पर बेच देता है और शेष को क्रय मूल्य पर बेच देता है। सम्पूर्ण लेन-देन में उसकी हानि या लाभ % होगा ?

- (1) लाभ 20%
- (2) हानि 5%
- (3) लाभ 40%
- (4) लाभ 25%

Options :

- 212807112205. 1
- 212807112206. 2
- 212807112207. 3
- 212807112208. 4

Question Number : 103 Question Id : 21280728053 Question Type : MCQ Option Shuffling : No Is Question Mandatory : No Calculator : None  
Response Time : N.A Think Time : N.A Minimum Instruction Time : 0

Correct Marks : 5 Wrong Marks : 1

Question Key Details :

Key	Value
Comprehension	MCQ



The price of rice increases by 30%. A family reduced its consumption so that the expenditure of the rice is up only by 10%. If the total consumption of the rice before the price rise was 10 kg per month, then the consumption of rice per month at present (in kg) is :

(1)  $7\frac{6}{15}$

(2)  $8\frac{1}{15}$

(3)  $8\frac{6}{13}$

(4)  $8\frac{5}{13}$

**Options :**

212807112209. 1

212807112210. 2

212807112211. 3

212807112212. 4

**Question Number : 103 Question Id : 21280728053 Question Type : MCQ Option Shuffling : No Is Question Mandatory : No Calculator : None Response Time : N.A Think Time : N.A Minimum Instruction Time : 0**

**Correct Marks : 5 Wrong Marks : 1**

**Question Key Details :**

Key	Value
Comprehension	MCQ

चावल का दाम 30% बढ़ जाता है। एक परिवार अपना उपयोग इतना कम कर देता है कि चावल के उपयोग पर उसके व्यय की बढ़त केवल 10% हो। यदि मूल्य वृद्धि के पूर्व उसका कुल उपयोग 10 kg प्रतिमाह हो तो वर्तमान में उसका उपयोग होगा :

(1)  $7\frac{6}{15}$  कि.ग्रा०

(2)  $8\frac{1}{15}$  कि.ग्रा०

(3)  $8\frac{6}{13}$  कि.ग्रा०

(4)  $8\frac{5}{13}$  कि.ग्रा०

**Options :**

212807112209. 1

212807112210. 2

212807112211. 3

212807112212. 4

**Question Number : 104 Question Id : 21280728054 Question Type : MCQ Option Shuffling : No Is Question Mandatory : No Calculator : None Response Time : N.A Think Time : N.A Minimum Instruction Time : 0**

**Correct Marks : 5 Wrong Marks : 1**

**Question Key Details :**

Key	Value
Comprehension	MCQ

If  $P(E) = 0.05$ , what is the probability of 'not E' ?

- (1) 0.05
- (2) 0.45
- (3) 0.95
- (4) 0.55

Options :

- 212807112213. 1
- 212807112214. 2
- 212807112215. 3
- 212807112216. 4

Question Number : 104 Question Id : 21280728054 Question Type : MCQ Option Shuffling : No Is Question Mandatory : No Calculator : None  
Response Time : N.A Think Time : N.A Minimum Instruction Time : 0

Correct Marks : 5 Wrong Marks : 1

Question Key Details :

Key	Value
Comprehension	MCQ

यदि  $P(E) = 0.05$ , तो 'not E' की प्रायिकता क्या होगी ?

- (1) 0.05
- (2) 0.45
- (3) 0.95
- (4) 0.55

Options :

- 212807112213. 1
- 212807112214. 2
- 212807112215. 3
- 212807112216. 4

Question Number : 105 Question Id : 21280728055 Question Type : MCQ Option Shuffling : No Is Question Mandatory : No Calculator : None  
Response Time : N.A Think Time : N.A Minimum Instruction Time : 0

Correct Marks : 5 Wrong Marks : 1

Question Key Details :

Key	Value
Comprehension	MCQ

By selling on book for ₹ 250, loss percentage is 10%. What is the cost price ?

- (1) 277.7
- (2) 250
- (3) 285
- (4) 315

Options :

- 212807112217. 1
- 212807112218. 2
- 212807112219. 3
- 212807112220. 4

Question Number : 105 Question Id : 21280728055 Question Type : MCQ Option Shuffling : No Is Question Mandatory : No Calculator : None  
Response Time : N.A Think Time : N.A Minimum Instruction Time : 0

Correct Marks : 5 Wrong Marks : 1

Question Key Details :

Key	Value
Comprehension	MCQ

एक पुस्तक को 250 रुपए में बेचने पर 10% हानि है। उसका क्रय मूल्य क्या है ?

- (1) 277.7 रुपए
- (2) 250 रुपए
- (3) 285 रुपए
- (4) 315 रुपए

Options :

- 212807112217. 1
- 212807112218. 2
- 212807112219. 3
- 212807112220. 4

Question Number : 106 Question Id : 21280728056 Question Type : MCQ Option Shuffling : No Is Question Mandatory : No Calculator : None Response Time : N.A Think Time : N.A Minimum Instruction Time : 0

Correct Marks : 5 Wrong Marks : 1

Question Key Details :

Key	Value
Comprehension	MCQ

If the mean of 5 observations  $x, x+2, x+4, x+6$  and  $x+8$  is 11, then value of  $x$  :

- (1) 7
- (2) 43
- (3) 51
- (4) 8

Options :

- 212807112221. 1
- 212807112222. 2
- 212807112223. 3
- 212807112224. 4

Question Number : 106 Question Id : 21280728056 Question Type : MCQ Option Shuffling : No Is Question Mandatory : No Calculator : None Response Time : N.A Think Time : N.A Minimum Instruction Time : 0

Correct Marks : 5 Wrong Marks : 1

Question Key Details :

Key	Value
Comprehension	MCQ

यदि 5 अवलोकनों  $x, x+2, x+4, x+6$  and  $x+8$  का माध्य 11 है, तब  $x$  होगा :

- (1) 7
- (2) 43
- (3) 51
- (4) 8

Options :

- 212807112221. 1
- 212807112222. 2
- 212807112223. 3
- 212807112224. 4

Question Number : 107 Question Id : 21280728057 Question Type : MCQ Option Shuffling : No Is Question Mandatory : No Calculator : None Response Time : N.A Think Time : N.A Minimum Instruction Time : 0

Correct Marks : 5 Wrong Marks : 1

Question Key Details :

Key	Value
Comprehension	MCQ

The surface area (in m<sup>2</sup>) of a sphere of radius 7 cm is :

$$\left( \text{Use } \pi = \frac{22}{7} \right)$$

- (1) 0.0616
- (2) 6.16
- (3) 61.6
- (4) 0.616

**Options :**

- 212807112225. 1
- 212807112226. 2
- 212807112227. 3
- 212807112228. 4

**Question Number : 107 Question Id : 21280728057 Question Type : MCQ Option Shuffling : No Is Question Mandatory : No Calculator : None Response Time : N.A Think Time : N.A Minimum Instruction Time : 0**

**Correct Marks : 5 Wrong Marks : 1**

**Question Key Details :**

Key	Value
Comprehension	MCQ

7 cm त्रिज्या वाले गोल का पृष्ठिय क्षेत्र (वर्ग मीटर में) फल होगा :

$$\left( \pi = \frac{22}{7} \right)$$

- (1) 0.0616
- (2) 6.16
- (3) 61.6
- (4) 0.616

**Options :**

- 212807112225. 1
- 212807112226. 2
- 212807112227. 3
- 212807112228. 4

**Question Number : 108 Question Id : 21280728058 Question Type : MCQ Option Shuffling : No Is Question Mandatory : No Calculator : None Response Time : N.A Think Time : N.A Minimum Instruction Time : 0**

**Correct Marks : 5 Wrong Marks : 1**

**Question Key Details :**

Key	Value
Comprehension	MCQ

₹ 800 becomes ₹ 956 in 3 years at a certain rate of simple interest. If the rate of interest is increased by 4%, what will ₹ 800 amount to in 3 years :

- (1) ₹ 1,020.80
- (2) ₹ 1,025
- (3) ₹ 1,052
- (4) ₹ 1,050

**Options :**

- 212807112229. 1
- 212807112230. 2
- 212807112231. 3
- 212807112232. 4

Question Number : 108 Question Id : 21280728058 Question Type : MCQ Option Shuffling : No Is Question Mandatory : No Calculator : None  
Response Time : N.A Think Time : N.A Minimum Instruction Time : 0

Correct Marks : 5 Wrong Marks : 1

Question Key Details :

Key	Value
Comprehension	MCQ

एक निश्चित साधारण ब्याज दर पर तीन वर्ष में 800 रुपए 956 रुपए हो जाते हैं। यदि ब्याज दर 4% बढ़ जाती है तो 800 रुपए 3 वर्ष में कितने रुपए हो जाएँगे ?

- (1) ₹ 1,020.80 रुपए  
(2) ₹ 1,025 रुपए  
(3) ₹ 1,052 रुपए  
(4) ₹ 1,050 रुपए

Options :

212807112229. 1  
212807112230. 2  
212807112231. 3  
212807112232. 4

Question Number : 109 Question Id : 21280728059 Question Type : MCQ Option Shuffling : No Is Question Mandatory : No Calculator : None  
Response Time : N.A Think Time : N.A Minimum Instruction Time : 0

Correct Marks : 5 Wrong Marks : 1

Question Key Details :

Key	Value
Comprehension	MCQ

A boy is running at a speed of  $p$  km/h to cover a distance of 1 km but due to slippery ground his speed is reduced by  $q$  km/h ( $p > q$ ). If he takes  $r$  hours to cover the distance, which of the following condition is true :

- (1)  $\frac{1}{r} = (p - q)$   
(2)  $r = (p - q)$   
(3)  $r = \frac{1}{p + q}$   
(4)  $r = p + q$

Options :

212807112233. 1  
212807112234. 2  
212807112235. 3  
212807112236. 4

Question Number : 109 Question Id : 21280728059 Question Type : MCQ Option Shuffling : No Is Question Mandatory : No Calculator : None  
Response Time : N.A Think Time : N.A Minimum Instruction Time : 0

Correct Marks : 5 Wrong Marks : 1

Question Key Details :

Key	Value
Comprehension	MCQ

एक लडका 'p' किलोमीटर प्रति घंटे की गति से '1' किलोमीटर दूरी तय करने के लिए दौड़ रहा है। परन्तु फिसलन वाली जमीन होने से उसकी गति 'q' किलोमीटर प्रति घंटा कम हो जाती है (p > q) यदि वह इस दूरी को तय करने में 'r' घंटे लेता है, तब निम्न में कौन सी स्थिति 'सत्य' है।

(1)  $\frac{1}{r} = (p - q)$

(2)  $r = (p - q)$

(3)  $r = \frac{1}{p + q}$

(4)  $r = p + q$

Options :

212807112233. 1

212807112234. 2

212807112235. 3

212807112236. 4

Question Number : 110 Question Id : 21280728060 Question Type : MCQ Option Shuffling : No Is Question Mandatory : No Calculator : None Response Time : N.A Think Time : N.A Minimum Instruction Time : 0

Correct Marks : 5 Wrong Marks : 1

Question Key Details :

Key	Value
Comprehension	MCQ

Which one of the following numbers is not a prime number ?

(1) 241

(2) 337

(3) 391

(4) 571

Options :

212807112237. 1

212807112238. 2

212807112239. 3

212807112240. 4

Question Number : 110 Question Id : 21280728060 Question Type : MCQ Option Shuffling : No Is Question Mandatory : No Calculator : None Response Time : N.A Think Time : N.A Minimum Instruction Time : 0

Correct Marks : 5 Wrong Marks : 1

Question Key Details :

Key	Value
Comprehension	MCQ

निम्न में कौन अभाज्य संख्या नहीं है ?

(1) 241

(2) 337

(3) 391

(4) 571

Options :

212807112237. 1

212807112238. 2

212807112239. 3

212807112240. 4

Question Number : 111 Question Id : 21280728061 Question Type : MCQ Option Shuffling : No Is Question Mandatory : No Calculator : None Response Time : N.A Think Time : N.A Minimum Instruction Time : 0

Correct Marks : 5 Wrong Marks : 1

Question Key Details :

Key	Value
Comprehension	MCQ

If  $\frac{x}{(b+c)(b+c-2a)} = \frac{y}{(c-a)(c+a-2b)} = \frac{z}{(a-b)(a+b-2c)}$  then value of  $x+y+z$  is :

- (1)  $a+b+c$
- (2)  $a^2+b^2+c^2$
- (3) 0
- (4) 1

Options :

- 212807112241. 1
- 212807112242. 2
- 212807112243. 3
- 212807112244. 4

Question Number : 111 Question Id : 21280728061 Question Type : MCQ Option Shuffling : No Is Question Mandatory : No Calculator : None Response Time : N.A Think Time : N.A Minimum Instruction Time : 0

Correct Marks : 5 Wrong Marks : 1

Question Key Details :

Key	Value
Comprehension	MCQ

यदि  $\frac{x}{(b+c)(b+c-2a)} = \frac{y}{(c-a)(c+a-2b)} = \frac{z}{(a-b)(a+b-2c)}$ ,  $x+y+z$  का मान है \_\_\_\_\_.

- (1)  $a+b+c$
- (2)  $a^2+b^2+c^2$
- (3) 0
- (4) 1

Options :

- 212807112241. 1
- 212807112242. 2
- 212807112243. 3
- 212807112244. 4

Question Number : 112 Question Id : 21280728062 Question Type : MCQ Option Shuffling : No Is Question Mandatory : No Calculator : None Response Time : N.A Think Time : N.A Minimum Instruction Time : 0

Correct Marks : 5 Wrong Marks : 1

Question Key Details :

Key	Value
Comprehension	MCQ

How many 3 digit even numbers can be formed from the digits (0-9) if repetition of digits are allowed ?

- (1) 350
- (2) 400
- (3) 450
- (4) 1000

Options :

- 212807112245. 1
- 212807112246. 2
- 212807112247. 3
- 212807112248. 4

Question Number : 112 Question Id : 21280728062 Question Type : MCQ Option Shuffling : No Is Question Mandatory : No Calculator : None  
Response Time : N.A Think Time : N.A Minimum Instruction Time : 0

Correct Marks : 5 Wrong Marks : 1

Question Key Details :

Key	Value
Comprehension	MCQ

यदि अंकों को दोहराने की अनुमति है, तो  $(0 - 9)$  से कितनी तीन अंकों की समसंख्या बनाई जा सकती हैं :

- (1) 350
- (2) 400
- (3) 450
- (4) 1000

Options :

212807112245. 1

212807112246. 2

212807112247. 3

212807112248. 4

Question Number : 113 Question Id : 21280728063 Question Type : MCQ Option Shuffling : No Is Question Mandatory : No Calculator : None  
Response Time : N.A Think Time : N.A Minimum Instruction Time : 0

Correct Marks : 5 Wrong Marks : 1

Question Key Details :

Key	Value
Comprehension	MCQ

The sum of an Infinite geometric series is 4 and the sum of the cubes of the terms of the same GP is 192. The Common Ratio of the original geometric series is :

- (1)  $\frac{1}{2}$
- (2)  $-\frac{1}{2}$
- (3)  $\frac{1}{4}$
- (4)  $-\frac{1}{4}$

Options :

212807112249. 1

212807112250. 2

212807112251. 3

212807112252. 4

Question Number : 113 Question Id : 21280728063 Question Type : MCQ Option Shuffling : No Is Question Mandatory : No Calculator : None  
Response Time : N.A Think Time : N.A Minimum Instruction Time : 0

Correct Marks : 5 Wrong Marks : 1

Question Key Details :

Key	Value
Comprehension	MCQ



एक अनन्त गुणोत्तर अनुक्रम का योग 4 है, इसी श्रेणी के पदों के घन का योग 192 है तो मूल गुणोत्तर श्रेणी का अनुपात है :

(1)  $\frac{1}{2}$

(2)  $-\frac{1}{2}$

(3)  $\frac{1}{4}$

(4)  $-\frac{1}{4}$

**Options :**

212807112249. 1

212807112250. 2

212807112251. 3

212807112252. 4

**Question Number : 114 Question Id : 21280728064 Question Type : MCQ Option Shuffling : No Is Question Mandatory : No Calculator : None Response Time : N.A Think Time : N.A Minimum Instruction Time : 0**

**Correct Marks : 5 Wrong Marks : 1**

**Question Key Details :**

Key	Value
Comprehension	MCQ

A bag contains 6 red, 4 blue and 10 white balls. A ball is picked from the bag at random. What is the probability that it is neither white nor blue ?

(1)  $\frac{20}{6}$

(2)  $\frac{3}{10}$

(3)  $\frac{2}{5}$

(4)  $\frac{1}{2}$

**Options :**

212807112253. 1

212807112254. 2

212807112255. 3

212807112256. 4

**Question Number : 114 Question Id : 21280728064 Question Type : MCQ Option Shuffling : No Is Question Mandatory : No Calculator : None Response Time : N.A Think Time : N.A Minimum Instruction Time : 0**

**Correct Marks : 5 Wrong Marks : 1**

**Question Key Details :**

Key	Value
Comprehension	MCQ

एक थैले में 6 लाल, 4 नीला तथा 10 सफेद बॉल है। एक बॉल को थैले से यादृच्छ निकाला जाता है, इसकी प्रायिकता ज्ञात करें कि बॉल ना तो नीला है ना ही सफेद ?

(1)  $\frac{20}{6}$

(2)  $\frac{3}{10}$

(3)  $\frac{2}{5}$

(4)  $\frac{1}{2}$

**Options :**

212807112253. 1

212807112254. 2

212807112255. 3

212807112256. 4

**Question Number : 115 Question Id : 21280728065 Question Type : MCQ Option Shuffling : No Is Question Mandatory : No Calculator : None Response Time : N.A Think Time : N.A Minimum Instruction Time : 0**

**Correct Marks : 5 Wrong Marks : 1**

**Question Key Details :**

Key	Value
Comprehension	MCQ

The volume of a sphere of radius r is obtained by multiplying its surface area with :

(1)  $\frac{4}{3}$

(2)  $\frac{r}{3}$

(3)  $\frac{4r}{3}$

(4)  $3r$

**Options :**

212807112257. 1

212807112258. 2

212807112259. 3

212807112260. 4

**Question Number : 115 Question Id : 21280728065 Question Type : MCQ Option Shuffling : No Is Question Mandatory : No Calculator : None Response Time : N.A Think Time : N.A Minimum Instruction Time : 0**

**Correct Marks : 5 Wrong Marks : 1**

**Question Key Details :**

Key	Value
Comprehension	MCQ

किसी  $r$  त्रिज्या वाले गोले के पृष्ठीय क्षेत्रफल को किसके साथ गुणा करने पर उसी त्रिज्या वाले गोले का आयतन प्राप्त होता है \_\_\_\_\_।

(1)  $\frac{4}{3}$

(2)  $\frac{r}{3}$

(3)  $\frac{4r}{3}$

(4)  $3r$

**Options :**

212807112257. 1

212807112258. 2

212807112259. 3

212807112260. 4

**Question Number : 116 Question Id : 21280728066 Question Type : MCQ Option Shuffling : No Is Question Mandatory : No Calculator : None Response Time : N.A Think Time : N.A Minimum Instruction Time : 0**

**Correct Marks : 5 Wrong Marks : 1**

**Question Key Details :**

Key	Value
Comprehension	MCQ

Find the area of an equilateral triangle each of whose sides measures 4 cm :

(1)  $4\sqrt{3} \text{ cm}^2$

(2)  $4\sqrt{3} \text{ m}^2$

(3)  $3\sqrt{3} \text{ cm}^2$

(4)  $3\sqrt{3} \text{ m}^2$

**Options :**

212807112261. 1

212807112262. 2

212807112263. 3

212807112264. 4

**Question Number : 116 Question Id : 21280728066 Question Type : MCQ Option Shuffling : No Is Question Mandatory : No Calculator : None Response Time : N.A Think Time : N.A Minimum Instruction Time : 0**

**Correct Marks : 5 Wrong Marks : 1**

**Question Key Details :**

Key	Value
Comprehension	MCQ

उस समबाहु का क्षेत्रफल ज्ञात करें जिसकी भुजा 4 सेमी. है :

(1)  $4\sqrt{3} \text{ सेमी.}^2$

(2)  $4\sqrt{3} \text{ मी.}^2$

(3)  $3\sqrt{3} \text{ सेमी.}^2$

(4)  $3\sqrt{3} \text{ मी.}^2$

**Options :**

212807112261. 1

212807112262. 2

212807112263. 3

212807112264. 4

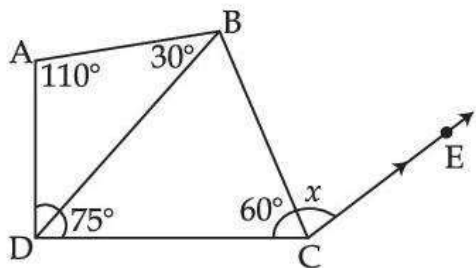
Question Number : 117 Question Id : 21280728067 Question Type : MCQ Option Shuffling : No Is Question Mandatory : No Calculator : None Response Time : N.A Think Time : N.A Minimum Instruction Time : 0

Correct Marks : 5 Wrong Marks : 1

Question Key Details :

Key	Value
Comprehension	MCQ

If  $CE \parallel DB$ , what is the value of  $x$  :



- (1)  $45^\circ$
- (2)  $30^\circ$
- (3)  $75^\circ$
- (4)  $85^\circ$

Options :

212807112265. 1

212807112266. 2

212807112267. 3

212807112268. 4

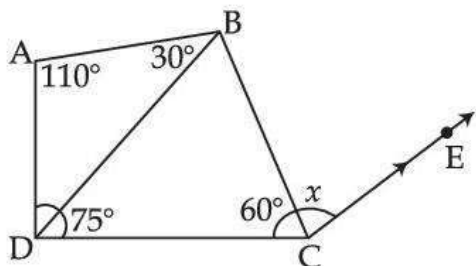
Question Number : 117 Question Id : 21280728067 Question Type : MCQ Option Shuffling : No Is Question Mandatory : No Calculator : None Response Time : N.A Think Time : N.A Minimum Instruction Time : 0

Correct Marks : 5 Wrong Marks : 1

Question Key Details :

Key	Value
Comprehension	MCQ

यदि  $CE \parallel DB$  है तो  $x$  का मान होगा :



- (1)  $45^\circ$
- (2)  $30^\circ$
- (3)  $75^\circ$
- (4)  $85^\circ$

Options :

212807112265. 1

212807112266. 2

212807112267. 3

Question Number : 118 Question Id : 21280728068 Question Type : MCQ Option Shuffling : No Is Question Mandatory : No Calculator : None  
Response Time : N.A Think Time : N.A Minimum Instruction Time : 0

Correct Marks : 5 Wrong Marks : 1

Question Key Details :

Key	Value
Comprehension	MCQ

A man standing on the bank of a river observes that the angle subtended by a tree standing on the opposite bank is  $60^\circ$  on his side of Bank. When he moved away 24 m from the bank, he finds the angle to be  $30^\circ$ . Find the breadth of the river :

- (1) 12
- (2) 18
- (3) 26
- (4) 20

Options :

212807112269.1

212807112270.2

212807112271.3

212807112272.4

Question Number : 118 Question Id : 21280728068 Question Type : MCQ Option Shuffling : No Is Question Mandatory : No Calculator : None  
Response Time : N.A Think Time : N.A Minimum Instruction Time : 0

Correct Marks : 5 Wrong Marks : 1

Question Key Details :

Key	Value
Comprehension	MCQ

नदी के किनारे खड़ा एक व्यक्ति अपने विपरीत किनारे पर स्थित एक पेड़ को  $60^\circ$  के कोण से देखता है। किनारे से 24 मीटर पीछे हटने पर वह पेड़ का कोण  $30^\circ$  पाता है, तो नदी की चौड़ाई बताये :

- (1) 12
- (2) 18
- (3) 26
- (4) 20

Options :

212807112269.1

212807112270.2

212807112271.3

212807112272.4

Question Number : 119 Question Id : 21280728069 Question Type : MCQ Option Shuffling : No Is Question Mandatory : No Calculator : None  
Response Time : N.A Think Time : N.A Minimum Instruction Time : 0

Correct Marks : 5 Wrong Marks : 1

Question Key Details :

Key	Value
Comprehension	MCQ

Which of the following statements are incorrect ?

(A) Volume of a cone =  $\frac{1}{3} \pi r^3 h$

(B) Volume of a cone =  $\frac{1}{3} \pi r^2 h$

(C) Volume of a hemisphere =  $\frac{2}{3} \pi r^2$

(D) Volume of a hemisphere =  $\frac{2}{3} \pi r^3$

(E) Volume of a cylinder =  $\frac{1}{3} \pi r^3 h$

Choose the **correct** answer from the options given below :

- (1) (A), (B) and (D) only
- (2) (A), (B) and (C) only
- (3) (A), (C) and (E) only
- (4) (C), (D) and (E) only

**Options :**

212807112273. 1

212807112274. 2

212807112275. 3

212807112276. 4

**Question Number : 119 Question Id : 21280728069 Question Type : MCQ Option Shuffling : No Is Question Mandatory : No Calculator : None Response Time : N.A Think Time : N.A Minimum Instruction Time : 0**

**Correct Marks : 5 Wrong Marks : 1**

**Question Key Details :**

Key	Value
Comprehension	MCQ

निम्न में कौन सा कथन गलत है \_\_\_\_\_ ।

(A) शंकु का आयतन =  $\frac{1}{3} \pi r^3 h$

(B) शंकु का आयतन =  $\frac{1}{3} \pi r^2 h$

(C) अर्द्धगोले का आयतन =  $\frac{2}{3} \pi r^2$

(D) अर्द्धगोले का आयतन =  $\frac{2}{3} \pi r^3$

(E) बेलन का आयतन =  $\frac{1}{3} \pi r^3 h$

नीचे दिए गए विकल्पों में से सही उत्तर का चयन कीजिए :

- (1) केवल (A), (B) एवं (D)
- (2) केवल (A), (B) एवं (C)
- (3) केवल (A), (C) एवं (E)
- (4) केवल (C), (D) एवं (E)

Options :

212807112273. 1

212807112274. 2

212807112275. 3

212807112276. 4

Question Number : 120 Question Id : 21280728070 Question Type : MCQ Option Shuffling : No Is Question Mandatory : No Calculator : None Response Time : N.A Think Time : N.A Minimum Instruction Time : 0

Correct Marks : 5 Wrong Marks : 1

Question Key Details :

Key	Value
Comprehension	MCQ

The difference between two numbers is 24. If one number is 2 times the second. Then the two numbers will be :

- (1) 36, 12
- (2) 48, 24
- (3) 32, 8
- (4) 12, 6

Options :

212807112277. 1

212807112278. 2

212807112279. 3

212807112280. 4

Question Number : 120 Question Id : 21280728070 Question Type : MCQ Option Shuffling : No Is Question Mandatory : No Calculator : None Response Time : N.A Think Time : N.A Minimum Instruction Time : 0

Correct Marks : 5 Wrong Marks : 1

Question Key Details :

Key	Value
Comprehension	MCQ

दो संख्याओं का अन्तर 24 है। यदि पहली संख्या दूसरी संख्या की दोगुनी हो तो उन संख्याओं को ज्ञात करें।

- (1) 36, 12
- (2) 48, 24
- (3) 32, 8
- (4) 12, 6

**Options :**

212807112277. 1  
212807112278. 2  
212807112279. 3  
212807112280. 4

**Question Number : 121 Question Id : 21280728071 Question Type : MCQ Option Shuffling : No Is Question Mandatory : No Calculator : None Response Time : N.A Think Time : N.A Minimum Instruction Time : 0**

**Correct Marks : 5 Wrong Marks : 1**

**Question Key Details :**

Key	Value
Comprehension	MCQ

Facing towards North, Ravi walks 30 m. He then turns left and walks 50 m. He again turns left and walks 30 m. How far is he from his original position and towards which direction ?

- (1) 30 m, North
- (2) 20 m, East
- (3) 20 m, South
- (4) 50 m, West

**Options :**

212807112281. 1  
212807112282. 2  
212807112283. 3  
212807112284. 4

**Question Number : 121 Question Id : 21280728071 Question Type : MCQ Option Shuffling : No Is Question Mandatory : No Calculator : None Response Time : N.A Think Time : N.A Minimum Instruction Time : 0**

**Correct Marks : 5 Wrong Marks : 1**

**Question Key Details :**

Key	Value
Comprehension	MCQ

उत्तर दिशा की ओर मुँह करके रवि 30 मीटर चलता है, तब वह बाँए मुड़ता है और 50 मीटर चलता है। वह फिर बाएँ मुड़ता है और 30 मीटर चलता है। वह अपनी मूल स्थिति से किस दिशा में और कितनी दूर है ?

- (1) 30 मीटर उत्तर
- (2) 20 मीटर पूर्व
- (3) 20 मीटर दक्षिण
- (4) 50 मीटर पश्चिम

**Options :**

212807112281. 1  
212807112282. 2  
212807112283. 3  
212807112284. 4

**Question Number : 122 Question Id : 21280728072 Question Type : MCQ Option Shuffling : No Is Question Mandatory : No Calculator : None Response Time : N.A Think Time : N.A Minimum Instruction Time : 0**

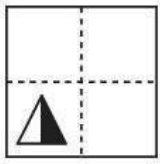
**Correct Marks : 5 Wrong Marks : 1**

**Question Key Details :**


Key	Value
-----	-------



Find from amongst the figure, the one which resembles the pattern formed when the transparent sheet is folded along the dotted line.



(1)




(2)



(3)



(4)

**Options :**

212807112285. 1

212807112286. 2

212807112287. 3

212807112288. 4

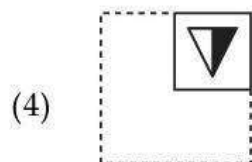
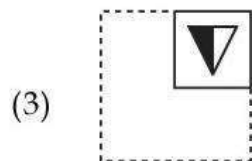
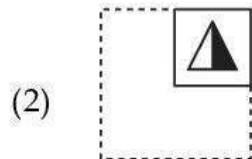


Question Number : 122 Question Id : 21280728072 Question Type : MCQ Option Shuffling : No Is Question Mandatory : No Calculator : None  
Response Time : N.A Think Time : N.A Minimum Instruction Time : 0

Correct Marks : 5 Wrong Marks : 1

**Question Key Details :**

Key	Value
Comprehension	MCQ

जब पारदर्शी शीट को बिन्दुकित रेखा के साथ मोड़ते हैं तो बने पैटर्न के साम्य वाली आकृति ज्ञात करें :



**Options :**

- 212807112285. 1
- 212807112286. 2
- 212807112287. 3
- 212807112288. 4

**Question Number : 123 Question Id : 21280728073 Question Type : MCQ Option Shuffling : No Is Question Mandatory : No Calculator : None Response Time : N.A Think Time : N.A Minimum Instruction Time : 0**

**Correct Marks : 5 Wrong Marks : 1**

**Question Key Details :**

Key	Value
Comprehension	MCQ

Find out the wrong number in the sequence :

40960, 10240, 2560, 640, 200, 40, 10

- (1) 40
- (2) 640
- (3) 200
- (4) 2560

**Options :**

- 212807112289. 1
- 212807112290. 2
- 212807112291. 3
- 212807112292. 4

**Question Number : 123 Question Id : 21280728073 Question Type : MCQ Option Shuffling : No Is Question Mandatory : No Calculator : None Response Time : N.A Think Time : N.A Minimum Instruction Time : 0**

Correct Marks : 5 Wrong Marks : 1

Question Key Details :

Key	Value
Comprehension	MCQ

क्रम में दी गई गलत संख्या ज्ञात करें।

40960, 10240, 2560, 640, 200, 40, 10

- (1) 40
- (2) 640
- (3) 200
- (4) 2560

Options :

212807112289. 1  
212807112290. 2  
212807112291. 3  
212807112292. 4

Question Number : 124 Question Id : 21280728074 Question Type : MCQ Option Shuffling : No Is Question Mandatory : No Calculator : None  
Response Time : N.A Think Time : N.A Minimum Instruction Time : 0

Correct Marks : 5 Wrong Marks : 1

Question Key Details :

Key	Value
Comprehension	MCQ

Two statements in the following questions, followed by two conclusions I and II. Read the conclusion and decide most suitable answer.

**Statements :** All horses are goats.  
No goat is a donkey.

**Conclusions :**

- (I) No horse is a donkey.
- (II) Atleast some goats are horses.

- (1) If only conclusion I follows.
- (2) If only conclusion II follows.
- (3) If both conclusion I and II follows.
- (4) If none of the conclusion follows.

Options :

212807112293. 1  
212807112294. 2  
212807112295. 3  
212807112296. 4

Question Number : 124 Question Id : 21280728074 Question Type : MCQ Option Shuffling : No Is Question Mandatory : No Calculator : None  
Response Time : N.A Think Time : N.A Minimum Instruction Time : 0

Correct Marks : 5 Wrong Marks : 1

Question Key Details :

Key	Value
Comprehension	MCQ

निम्न प्रश्न में दो कथन और उसी के नीचे दो निष्कर्ष I और II हैं। निष्कर्ष को पढ़कर सबसे उपयुक्त उत्तर का निश्चय करें :

**कथन :**  
सभी घोड़ों बकरी है।  
कोई बकरी गधा नहीं है।

**निष्कर्ष :**

- (I) कोई घोड़ा गधा नहीं है।  
(II) कम से कम कुछ बकरी घोड़े है।

- (1) यदि केवल निष्कर्ष I अनुगमन करता है।  
(2) यदि केवल निष्कर्ष II अनुगमन करता है।  
(3) यदि दोनों निष्कर्ष I और II अनुगमन करते हैं।  
(4) यदि कोई भी निष्कर्ष अनुगमन नहीं करता है।

**Options :**

212807112293. 1  
212807112294. 2  
212807112295. 3  
212807112296. 4

**Question Number : 125 Question Id : 21280728075 Question Type : MCQ Option Shuffling : No Is Question Mandatory : No Calculator : None**  
**Response Time : N.A Think Time : N.A Minimum Instruction Time : 0**

**Correct Marks : 5 Wrong Marks : 1**

**Question Key Details :**

Key	Value
Comprehension	MCQ

Look at the statement and mark the correct answer on the conclusions that follows :

**Statements :**  
A. Shubham is my cousin.  
B. A cousin may be a aunt's son, uncle's son or son of parent's step-siblings.

**Conclusions :**

- (I) Shubham is my sisters son.  
(II) Shubham is my uncle's son.

- (1) Only conclusion I follows.  
(2) Only conclusion II follows.  
(3) Both conclusion I and II follows.  
(4) Neither conclusion I nor II follows.

**Options :**

212807112297. 1  
212807112298. 2  
212807112299. 3  
212807112300. 4

**Question Number : 125 Question Id : 21280728075 Question Type : MCQ Option Shuffling : No Is Question Mandatory : No Calculator : None**  
**Response Time : N.A Think Time : N.A Minimum Instruction Time : 0**

**Correct Marks : 5 Wrong Marks : 1**

**Question Key Details :**

Key	Value
Comprehension	MCQ

कथन को देखे और दिए गए निष्कर्ष पर सही उत्तर को चिह्नित करें :

- कथन :**
- A. शुभम मेरा संबंधी भाई है।
  - B. संबंधी भाई अण्टी का बेटा, अंकल का बेटा या माता-पिता के सौतले भाई-बहन का बेटा हो सकता है।

**निष्कर्ष :**

- (I) शुभम मेरी बहन का बेटा है।
- (II) शुभम मेरे चाचा का बेटा है।

- (1) यदि केवल निष्कर्ष I अनुसरण करता है।
- (2) यदि केवल निष्कर्ष II अनुसरण करता है।
- (3) यदि दोनों निष्कर्ष I और II अनुसरण करते हैं।
- (4) यदि कोई भी निष्कर्ष अनुसरण नहीं करता है।

**Options :**

- 212807112297. 1
- 212807112298. 2
- 212807112299. 3
- 212807112300. 4

**Question Number : 126 Question Id : 21280728076 Question Type : MCQ Option Shuffling : No Is Question Mandatory : No Calculator : None Response Time : N.A Think Time : N.A Minimum Instruction Time : 0**

**Correct Marks : 5 Wrong Marks : 1**

**Question Key Details :**

Key	Value
Comprehension	MCQ

Five children Arun, Bhuvi, Charu, Deepak and Emmy are sitting along the corners of a pentagonal table facing the centre. Bhuvi is between Emmy and Charu. Deepak is to the right of Emmy. Who is to the left of Charu ?

- (1) Bhuvi
- (2) Arun
- (3) Charu
- (4) Deepak

**Options :**

- 212807112301. 1
- 212807112302. 2
- 212807112303. 3
- 212807112304. 4

**Question Number : 126 Question Id : 21280728076 Question Type : MCQ Option Shuffling : No Is Question Mandatory : No Calculator : None Response Time : N.A Think Time : N.A Minimum Instruction Time : 0**

**Correct Marks : 5 Wrong Marks : 1**

**Question Key Details :**

Key	Value
Comprehension	MCQ

पाँच बच्चे अरूण, भूवी, चारू, दीपक और इम्मी एक पंचकोणीय मेज के कोनों पर केन्द्र की ओर मुख करके बैठे हैं। भूवी, इम्मी और चारू के बीच बैठी है। दीपक, इम्मी के दायें हैं। चारू के बायी ओर कौन है ?

- (1) भूवी
- (2) अरूण
- (3) चारू
- (4) दीपक

**Options :**

212807112301. 1  
 212807112302. 2  
 212807112303. 3  
 212807112304. 4

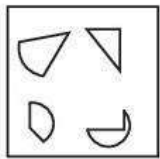
**Question Number : 127 Question Id : 21280728077 Question Type : MCQ Option Shuffling : No Is Question Mandatory : No Calculator : None Response Time : N.A Think Time : N.A Minimum Instruction Time : 0**

**Correct Marks : 5 Wrong Marks : 1**

**Question Key Details :**

Key	Value
Comprehension	MCQ

Find out the figure that can be formed from the piece given below :



- (1)
- (2)
- (3)
- (4)

**Options :**

212807112305. 1  
 212807112306. 2  
 212807112307. 3  
 212807112308. 4

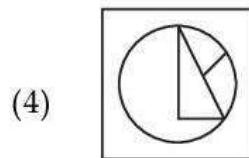
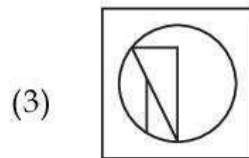
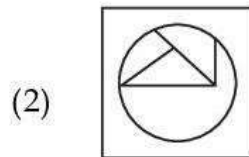
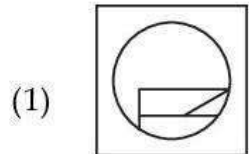
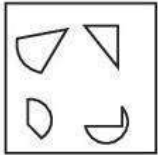
Question Number : 127 Question Id : 21280728077 Question Type : MCQ Option Shuffling : No Is Question Mandatory : No Calculator : None  
Response Time : N.A Think Time : N.A Minimum Instruction Time : 0

Correct Marks : 5 Wrong Marks : 1

Question Key Details :

Key	Value
Comprehension	MCQ

नीचे दिए गए भाग की आकृतियों से कौन-सी आकृति बनाई जा सकती है, ज्ञात कीजिए :



Options :

212807112305. 1

212807112306. 2

212807112307. 3

212807112308. 4

Question Number : 128 Question Id : 21280728078 Question Type : MCQ Option Shuffling : No Is Question Mandatory : No Calculator : None  
Response Time : N.A Think Time : N.A Minimum Instruction Time : 0

Correct Marks : 5 Wrong Marks : 1

Question Key Details :

Key	Value
Comprehension	MCQ

Amar is 16<sup>th</sup> from the left end in a row of boys and Vishal is 18<sup>th</sup> from the right end. Satish is 11<sup>th</sup> towards the right of Amar and 3<sup>rd</sup> towards the right of Vishal side end. How many boys are there in a row ?

(1) 45

(2) 26

(3) 39

(4) 41

Options :

212807112309.1  
212807112310.2  
212807112311.3  
212807112312.4

**Question Number : 128 Question Id : 21280728078 Question Type : MCQ Option Shuffling : No Is Question Mandatory : No Calculator : None  
Response Time : N.A Think Time : N.A Minimum Instruction Time : 0**

**Correct Marks : 5 Wrong Marks : 1**

**Question Key Details :**

Key	Value
Comprehension	MCQ

लड़कों की एक पंक्ति में अमर बायें छोर से 16 वें स्थान पर है और विशाल दायें छोर से 18 वें स्थान पर है। सतीश, अमर से दायें ओर 11 वें स्थान पर है और विशाल से दायें ओर पर तीसरे स्थान पर है। पंक्ति में कितने लड़के हैं?

- (1) 45
- (2) 26
- (3) 39
- (4) 41

**Options :**

212807112309.1  
212807112310.2  
212807112311.3  
212807112312.4

**Question Number : 129 Question Id : 21280728079 Question Type : MCQ Option Shuffling : No Is Question Mandatory : No Calculator : None  
Response Time : N.A Think Time : N.A Minimum Instruction Time : 0**

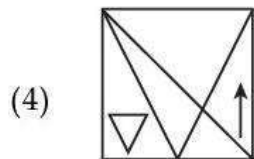
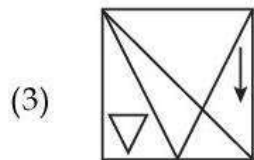
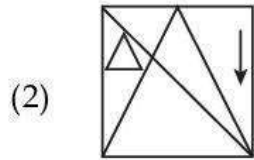
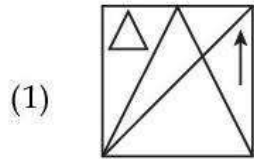
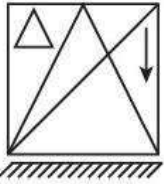
**Correct Marks : 5 Wrong Marks : 1**

**Question Key Details :**

Key	Value
Comprehension	MCQ



Choose the correct mirror image :



**Options :**

212807112313. 1

212807112314. 2

212807112315. 3

212807112316. 4

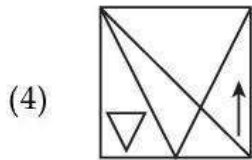
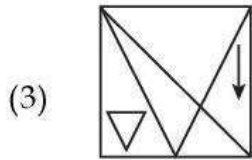
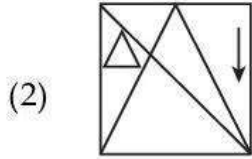
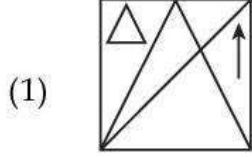
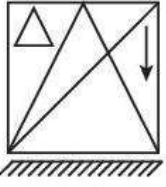
**Question Number : 129 Question Id : 21280728079 Question Type : MCQ Option Shuffling : No Is Question Mandatory : No Calculator : None Response Time : N.A Think Time : N.A Minimum Instruction Time : 0**

**Correct Marks : 5 Wrong Marks : 1**

**Question Key Details :**

Key	Value
Comprehension	MCQ

सही दर्पण प्रतिबिम्ब चुने :



Options :

212807112313. 1

212807112314. 2

212807112315. 3

212807112316. 4

Question Number : 130 Question Id : 21280728080 Question Type : MCQ Option Shuffling : No Is Question Mandatory : No Calculator : None Response Time : N.A Think Time : N.A Minimum Instruction Time : 0

Correct Marks : 5 Wrong Marks : 1

Question Key Details :

Key	Value
Comprehension	MCQ

Commemoration of national days should always be encouraged in schools and colleges. Which of the following statement given below is a strong argument :

- (A) This type of commemoration gives opportunity to children and youth to value to contribution of people who built our nation.
- (B) There is nothing wrong in celebrating a day and enjoy once is a while.
- (C) These events hamper the focus of students from regular study.
- (1) Argument (A) and (B) are strong
- (2) Only argument (A) is strong
- (3) Argument (B) and (C) are strong
- (4) Only argument (C) is strong

Options :

212807112317. 1

212807112318. 2  
212807112319. 3  
212807112320. 4

Question Number : 130 Question Id : 21280728080 Question Type : MCQ Option Shuffling : No Is Question Mandatory : No Calculator : None  
Response Time : N.A Think Time : N.A Minimum Instruction Time : 0

Correct Marks : 5 Wrong Marks : 1

Question Key Details :

Key	Value
Comprehension	MCQ

स्कूलों और कॉलेजों में राष्ट्रीय दिवस मनाने के लिए हमेशा प्रोत्साहित किया जाना चाहिए। निम्नलिखित में से कौन सा कथन इस तर्क को प्रबल करता है।

- (A) इस प्रकार का स्मरणोत्सव युवाओं और बच्चों को उन लोगों के योगदान को महत्व देने का अवसर देता है जिन्होंने हमारे राष्ट्र का निर्माण किया।
- (B) कभी-कभी एक दिन उत्सव को मनाने में और उसका आनंद लेने में कुछ भी गलत नहीं है।
- (C) ये घटनाएं नियमित अध्ययन से छात्रों के ध्यान को बाधित करती हैं।
- (1) तर्क (A) और (B) प्रबल हैं।
- (2) केवल तर्क (A) प्रबल है।
- (3) तर्क (B) और (C) प्रबल हैं।
- (4) केवल तर्क (C) प्रबल है।

Options :

212807112317. 1  
212807112318. 2  
212807112319. 3  
212807112320. 4

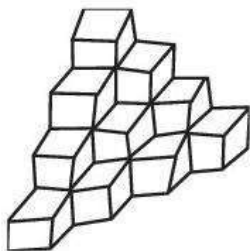
Question Number : 131 Question Id : 21280728081 Question Type : MCQ Option Shuffling : No Is Question Mandatory : No Calculator : None  
Response Time : N.A Think Time : N.A Minimum Instruction Time : 0

Correct Marks : 5 Wrong Marks : 1

Question Key Details :

Key	Value
Comprehension	MCQ

How many cubes are there in a group ?



- (1) 10  
(2) 16  
(3) 18  
(4) 20

Options :

212807112321. 1  
212807112322. 2  
212807112323. 3  
212807112324. 4

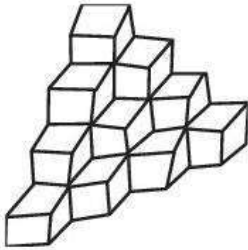
Question Number : 131 Question Id : 21280728081 Question Type : MCQ Option Shuffling : No Is Question Mandatory : No Calculator : None  
Response Time : N.A Think Time : N.A Minimum Instruction Time : 0

Correct Marks : 5 Wrong Marks : 1

Question Key Details :

Key	Value
Comprehension	MCQ

इस समूह में कितने घन हैं ?



- (1) 10
- (2) 16
- (3) 18
- (4) 20

Options :

- 212807112321. 1
- 212807112322. 2
- 212807112323. 3
- 212807112324. 4

Question Number : 132 Question Id : 21280728082 Question Type : MCQ Option Shuffling : No Is Question Mandatory : No Calculator : None  
Response Time : N.A Think Time : N.A Minimum Instruction Time : 0

Correct Marks : 5 Wrong Marks : 1

Question Key Details :

Key	Value
Comprehension	MCQ

Given below are two statements, one is labelled as **Assertion (A)** and the other is labelled as **Reason (R)**.

**Assertion (A)** : Clothes are not washed properly in hard water.

**Reason (R)** : Hard water contains many minerals.

In the light of the above statements, choose the **most appropriate** answer from the options given below :

- (1) Both (A) and (R) are correct and (R) is the correct explanation of (A)
- (2) Both (A) and (R) are correct but (R) is not the correct explanation of (A)
- (3) (A) is correct but (R) is not correct
- (4) (A) is not correct but (R) is correct

Options :

- 212807112325. 1
- 212807112326. 2
- 212807112327. 3
- 212807112328. 4

Question Number : 132 Question Id : 21280728082 Question Type : MCQ Option Shuffling : No Is Question Mandatory : No Calculator : None  
Response Time : N.A Think Time : N.A Minimum Instruction Time : 0

Correct Marks : 5 Wrong Marks : 1

Question Key Details :

Key	Value
Comprehension	MCQ

नीचे दो कथन दिए गए हैं: एक **अभिकथन (A)** के रूप में लिखित है तो दूसरा उसके **कारण (R)** के रूप में है।

**अभिकथन (A) :** कपड़े कठोर जल में अच्छी तरह से नहीं धोए जाते हैं।

**कारण (R) :** कठोर जल में बहुत सारे खनिज पाये जाते हैं।

उपरोक्त कथनों के प्रकाश में, नीचे दिए गये विकल्पों में से सर्वाधिक उपयुक्त **उत्तर** का चयन कीजिए :

- (1) (A) तथा (R) दोनों सही हैं तथा (R), (A) की सही व्याख्या है
- (2) (A) तथा (R) दोनों सही हैं लेकिन (R), (A) की सही व्याख्या नहीं है
- (3) (A) सही है, लेकिन (R) सही नहीं है
- (4) (A) सही नहीं है लेकिन (R) सही है

**Options :**

212807112325. 1

212807112326. 2

212807112327. 3

212807112328. 4

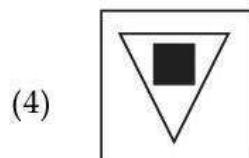
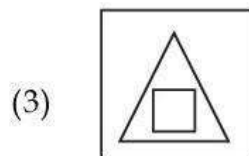
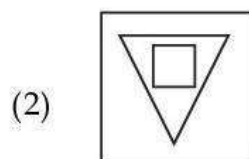
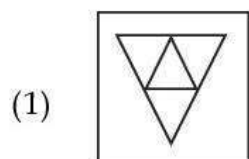
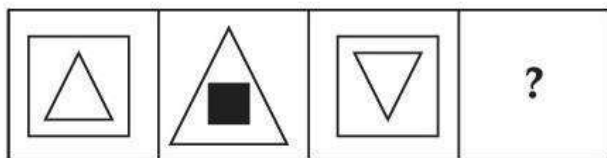
**Question Number :** 133 **Question Id :** 21280728083 **Question Type :** MCQ **Option Shuffling :** No **Is Question Mandatory :** No **Calculator :** None  
**Response Time :** N.A **Think Time :** N.A **Minimum Instruction Time :** 0

**Correct Marks :** 5 **Wrong Marks :** 1

**Question Key Details :**

Key	Value
Comprehension	MCQ

Complete the picture series :



**Options :**

212807112329. 1

212807112330. 2  
212807112331. 3  
212807112332. 4

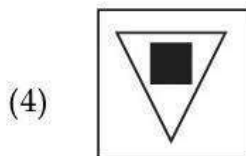
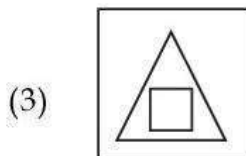
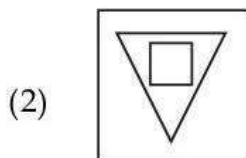
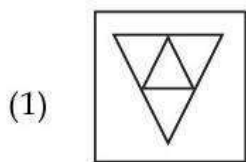
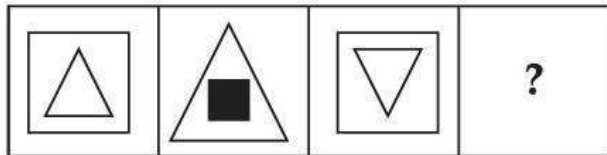
Question Number : 133 Question Id : 21280728083 Question Type : MCQ Option Shuffling : No Is Question Mandatory : No Calculator : None  
Response Time : N.A Think Time : N.A Minimum Instruction Time : 0

Correct Marks : 5 Wrong Marks : 1

Question Key Details :

Key	Value
Comprehension	MCQ

चित्र शृंखला को पूरा करें :



Options :

212807112329. 1  
212807112330. 2  
212807112331. 3  
212807112332. 4

Question Number : 134 Question Id : 21280728084 Question Type : MCQ Option Shuffling : No Is Question Mandatory : No Calculator : None  
Response Time : N.A Think Time : N.A Minimum Instruction Time : 0

Correct Marks : 5 Wrong Marks : 1

Question Key Details :

Key	Value
Comprehension	MCQ







Key	Value
Comprehension	MCQ

यदि EFFECTIVE को FEGDDSJUF के रूप में कूट भाषा में लिखा जाता है, तब RELATIVE को कैसे कूट भाषा में लिखा जाएगा ?

- (1) TDNZVHXD
- (2) TCNAVGXC
- (3) SDMZUHWD
- (4) SCMAUGXD

**Options :**

212807112337. 1  
212807112338. 2  
212807112339. 3  
212807112340. 4

**Question Number : 136 Question Id : 21280728086 Question Type : MCQ Option Shuffling : No Is Question Mandatory : No Calculator : None Response Time : N.A Think Time : N.A Minimum Instruction Time : 0**

**Correct Marks : 5 Wrong Marks : 1**

**Question Key Details :**

Key	Value
Comprehension	MCQ

Find the next term in the alpha-numeric series :

Z1A, W8C, T27E, Q64G, N125I, \_\_\_ ? \_\_\_

- (1) K216L
- (2) K216K
- (3) L343K
- (4) L343L

**Options :**

212807112341. 1  
212807112342. 2  
212807112343. 3  
212807112344. 4

**Question Number : 136 Question Id : 21280728086 Question Type : MCQ Option Shuffling : No Is Question Mandatory : No Calculator : None Response Time : N.A Think Time : N.A Minimum Instruction Time : 0**

**Correct Marks : 5 Wrong Marks : 1**

**Question Key Details :**

Key	Value
Comprehension	MCQ

नीचे दी गई श्रृंखला में अगला पद ज्ञात करे

Z1A, W8C, T27E, Q64G, N125I, \_\_\_ ? \_\_\_

- (1) K216L
- (2) K216K
- (3) L343K
- (4) L343L

**Options :**

212807112341. 1  
212807112342. 2  
212807112343. 3  
212807112344. 4

**Question Number : 137 Question Id : 21280728087 Question Type : MCQ Option Shuffling : No Is Question Mandatory : No Calculator : None Response Time : N.A Think Time : N.A Minimum Instruction Time : 0**

**Correct Marks : 5 Wrong Marks : 1**

**Question Key Details :**

Key	Value
Comprehension	MCQ

What can be placed at '?' if both side of ': : ' have same relationship between numbers :

85 : 42 :: 139 : \_\_\_ ?

- (1) 68
- (2) 69
- (3) 70
- (4) 67

**Options :**

212807112345. 1  
212807112346. 2  
212807112347. 3  
212807112348. 4

**Question Number : 137 Question Id : 21280728087 Question Type : MCQ Option Shuffling : No Is Question Mandatory : No Calculator : None Response Time : N.A Think Time : N.A Minimum Instruction Time : 0**

**Correct Marks : 5 Wrong Marks : 1**

**Question Key Details :**

Key	Value
Comprehension	MCQ

' ? ' के स्थान पर क्या आएगा, अगर ': : ' के दोनों तरफ दी संख्याओं में संबंध एक जैसा है।

85 : 42 :: 139 : \_\_\_ ?

- (1) 68
- (2) 69
- (3) 70
- (4) 67

**Options :**

212807112345. 1  
212807112346. 2  
212807112347. 3  
212807112348. 4

**Question Number : 138 Question Id : 21280728088 Question Type : MCQ Option Shuffling : No Is Question Mandatory : No Calculator : None Response Time : N.A Think Time : N.A Minimum Instruction Time : 0**

**Correct Marks : 5 Wrong Marks : 1**

**Question Key Details :**

Key	Value
Comprehension	MCQ

Following question is based on the information given below :

- (i) 'R × S' means 'R is father of S'
- (ii) 'R - S' means 'R is sister of S'
- (iii) 'R + S' means 'R is mother of S'
- (iv) 'R ÷ S' means 'R is brother of S'

In the expression  $A + B \times C \div D$  how is C related to A ?

- (1) Son
- (2) Grandson
- (3) Granddaughter
- (4) Grandmother

**Options :**

212807112349. 1

212807112350. 2  
212807112351. 3  
212807112352. 4

Question Number : 138 Question Id : 21280728088 Question Type : MCQ Option Shuffling : No Is Question Mandatory : No Calculator : None  
Response Time : N.A Think Time : N.A Minimum Instruction Time : 0

Correct Marks : 5 Wrong Marks : 1

Question Key Details :

Key	Value
Comprehension	MCQ

निम्नलिखित प्रश्न नीचे दी गयी जानकारी पर आधारित है।

- (i)  $R \times S$  का अर्थ है, R, S का पिता है
- (ii)  $R - S$  का अर्थ है, R, S की बहन है
- (iii)  $R + S$  का अर्थ है, R, S की माता है।
- (iv)  $R \div S$  का अर्थ है, R, S का भाई है।

अभिव्यक्ति  $A + B \times C \div D$  में C, A से किस प्रकार संबंधित है।

- (1) पुत्र
- (2) पोता
- (3) पोती
- (4) दादी

Options :

212807112349. 1  
212807112350. 2  
212807112351. 3  
212807112352. 4

Question Number : 139 Question Id : 21280728089 Question Type : MCQ Option Shuffling : No Is Question Mandatory : No Calculator : None  
Response Time : N.A Think Time : N.A Minimum Instruction Time : 0

Correct Marks : 5 Wrong Marks : 1

Question Key Details :

Key	Value
Comprehension	MCQ

If Today is Monday, After 62 it will be :

- (1) Wednesday
- (2) Saturday
- (3) Sunday
- (4) Thursday

Options :

212807112353. 1  
212807112354. 2  
212807112355. 3  
212807112356. 4

Question Number : 139 Question Id : 21280728089 Question Type : MCQ Option Shuffling : No Is Question Mandatory : No Calculator : None  
Response Time : N.A Think Time : N.A Minimum Instruction Time : 0

Correct Marks : 5 Wrong Marks : 1

Question Key Details :

Key	Value
Comprehension	MCQ

यदि आज सोमवार हैं, 62 दिनों के बाद क्या होगा :

- (1) बुधवार
- (2) शनिवार
- (3) रविवार
- (4) बृहस्पतिवार

**Options :**

212807112353. 1  
212807112354. 2  
212807112355. 3  
212807112356. 4

**Question Number : 140 Question Id : 21280728090 Question Type : MCQ Option Shuffling : No Is Question Mandatory : No Calculator : None Response Time : N.A Think Time : N.A Minimum Instruction Time : 0**

**Correct Marks : 5 Wrong Marks : 1**

**Question Key Details :**

Key	Value
Comprehension	MCQ

A clock is started at noon. By 20 minutes past 6, the hand has turned through :

- (1)  $175^\circ$
- (2)  $180^\circ$
- (3)  $185^\circ$
- (4)  $190^\circ$

**Options :**

212807112357. 1  
212807112358. 2  
212807112359. 3  
212807112360. 4

**Question Number : 140 Question Id : 21280728090 Question Type : MCQ Option Shuffling : No Is Question Mandatory : No Calculator : None Response Time : N.A Think Time : N.A Minimum Instruction Time : 0**

**Correct Marks : 5 Wrong Marks : 1**

**Question Key Details :**

Key	Value
Comprehension	MCQ

एक घड़ी दोपहर के समय शुरू हुई। 6 बजकर 20 मिनट तक घंटे की सुई कितना घूम चुकी होगी :

- (1)  $175^\circ$
- (2)  $180^\circ$
- (3)  $185^\circ$
- (4)  $190^\circ$

**Options :**

212807112357. 1  
212807112358. 2  
212807112359. 3  
212807112360. 4

**Question Number : 141 Question Id : 21280728091 Question Type : MCQ Option Shuffling : No Is Question Mandatory : No Calculator : None Response Time : N.A Think Time : N.A Minimum Instruction Time : 0**

**Correct Marks : 5 Wrong Marks : 1**

**Question Key Details :**

Key	Value
Comprehension	MCQ

Who has been honoured with the Golden ball award in the FIFA World Cup 2022 ?

- (1) Kylian Mbappe
- (2) Luka Modric
- (3) Lionel Messi
- (4) Enzo Fernandez

**Options :**

212807112361. 1  
212807112362. 2  
212807112363. 3  
212807112364. 4

**Question Number : 141 Question Id : 21280728091 Question Type : MCQ Option Shuffling : No Is Question Mandatory : No Calculator : None Response Time : N.A Think Time : N.A Minimum Instruction Time : 0**

**Correct Marks : 5 Wrong Marks : 1**

**Question Key Details :**

Key	Value
Comprehension	MCQ

फीफा विश्व कप 2022 में किसे गोल्डन बाल अवार्ड से सम्मानित किया गया ?

- (1) किलियन एम्बाप्पे
- (2) लुका मोड्रिक
- (3) लियोनेल मेसी
- (4) एज़ो फर्नांडीज

**Options :**

212807112361. 1  
212807112362. 2  
212807112363. 3  
212807112364. 4

**Question Number : 142 Question Id : 21280728092 Question Type : MCQ Option Shuffling : No Is Question Mandatory : No Calculator : None Response Time : N.A Think Time : N.A Minimum Instruction Time : 0**

**Correct Marks : 5 Wrong Marks : 1**

**Question Key Details :**

Key	Value
Comprehension	MCQ

Given below are two statements : one is labelled as **Assertion (A)** and the other is labelled as **Reason (R)**.

**Assertion (A) :** The 73<sup>rd</sup> Amendment granted constitutional states to the Gram Sabha.

**Reason (R) :** The Balawant Rai Mehta committee mentioned the Gram Sabha.

In the light of the above statements, choose the **most appropriate** answer from the options given below :

- (1) Both (A) and (R) are correct and (R) is the correct explanation of (A)
- (2) Both (A) and (R) are correct but (R) is not the correct explanation of (A)
- (3) (A) is true but (R) is not false
- (4) (A) is false but (R) is true

**Options :**

212807112365. 1  
212807112366. 2  
212807112367. 3  
212807112368. 4

Question Number : 142 Question Id : 21280728092 Question Type : MCQ Option Shuffling : No Is Question Mandatory : No Calculator : None  
Response Time : N.A Think Time : N.A Minimum Instruction Time : 0

Correct Marks : 5 Wrong Marks : 1

Question Key Details :

Key	Value
Comprehension	MCQ

नीचे दो कथन दिए गए हैं: एक **अभिकथन (A)** के रूप में लिखित है तो दूसरा उसके **कारण (R)** के रूप में है।

**अभिकथन (A) :** 73 वें संशोधन के द्वारा ग्राम सभा को संवैधानिक दर्जा दिया गया।

**कारण (R) :** बलवंत राय मेहता समिति ने ग्राम सभा को उल्लिखित किया।

उपरोक्त कथनों के प्रकाश में, नीचे दिए गये विकल्पों में से सर्वाधिक उपयुक्त **उत्तर** का चयन कीजिए :

- (1) (A) तथा (R) दोनों सही हैं तथा (R), (A) की सही व्याख्या है
- (2) (A) तथा (R) दोनों सही हैं लेकिन (R), (A) की सही व्याख्या नहीं है
- (3) (A) सही है, लेकिन (R) सही नहीं है
- (4) (A) सही नहीं है लेकिन (R) सही है

Options :

212807112365. 1  
212807112366. 2  
212807112367. 3  
212807112368. 4

Question Number : 143 Question Id : 21280728093 Question Type : MCQ Option Shuffling : No Is Question Mandatory : No Calculator : None  
Response Time : N.A Think Time : N.A Minimum Instruction Time : 0

Correct Marks : 5 Wrong Marks : 1

Question Key Details :

Key	Value
Comprehension	MCQ

The 36<sup>th</sup> National Games 2022 was held in which of the following state ?

- (1) Goa
- (2) Gujarat
- (3) Haryana
- (4) Karnataka

Options :

212807112369. 1  
212807112370. 2  
212807112371. 3  
212807112372. 4

Question Number : 143 Question Id : 21280728093 Question Type : MCQ Option Shuffling : No Is Question Mandatory : No Calculator : None  
Response Time : N.A Think Time : N.A Minimum Instruction Time : 0

Correct Marks : 5 Wrong Marks : 1

Question Key Details :

Key	Value
Comprehension	MCQ

36 वां राष्ट्रीय खेल 2022 कौन से राज्य में आयोजित हुआ ?

- (1) गोवा
- (2) गुजरात
- (3) हरियाणा
- (4) कर्नाटक

**Options :**

212807112369. 1  
212807112370. 2  
212807112371. 3  
212807112372. 4

**Question Number : 144 Question Id : 21280728094 Question Type : MCQ Option Shuffling : No Is Question Mandatory : No Calculator : None Response Time : N.A Think Time : N.A Minimum Instruction Time : 0**

**Correct Marks : 5 Wrong Marks : 1**

**Question Key Details :**

Key	Value
Comprehension	MCQ

Who among the following gave the popular slogan "Home Rule is my birthright and I will have it" ?

- (1) Annie Besant
- (2) Lokamanya Tilak
- (3) Dadabhai Naoroji
- (4) Aurobindo Ghose

**Options :**

212807112373. 1  
212807112374. 2  
212807112375. 3  
212807112376. 4

**Question Number : 144 Question Id : 21280728094 Question Type : MCQ Option Shuffling : No Is Question Mandatory : No Calculator : None Response Time : N.A Think Time : N.A Minimum Instruction Time : 0**

**Correct Marks : 5 Wrong Marks : 1**

**Question Key Details :**

Key	Value
Comprehension	MCQ

“स्वराज्य हमारा जन्म सिद्ध अधिकार है मैं इसे लेकर रहूंगा” निम्नलिखित में से किसका लोकप्रिय नारा है ?

- (1) एनी बेसेंट
- (2) लोकमान्य तिलक
- (3) दादाभाई नरौजी
- (4) अरविंदों घोष

**Options :**

212807112373. 1  
212807112374. 2  
212807112375. 3  
212807112376. 4

**Question Number : 145 Question Id : 21280728095 Question Type : MCQ Option Shuffling : No Is Question Mandatory : No Calculator : None Response Time : N.A Think Time : N.A Minimum Instruction Time : 0**

**Correct Marks : 5 Wrong Marks : 1**

**Question Key Details :**

Key	Value
Comprehension	MCQ

Match List - I with List - II.

**List - I**

- (A) First speaker of Lok Sabha
- (B) First Indian to get Bharat Ratna Award
- (C) First Indian recipient of Nobel Prize in Economics
- (D) First Indian Nobel Laureate

**List - II**

- (I) Dr. Amartya Sen
- (II) G.V. Mavalankar
- (III) Dr. S. Radhakrishnan
- (IV) Rabindra Nath Tagore

Choose the **correct** answer from the options given below :

- (1) (A)-(II), (B)-(III), (C)-(I), (D)-(IV)
- (2) (A)-(II), (B)-(III), (C)-(IV), (D)-(I)
- (3) (A)-(III), (B)-(II), (C)-(I), (D)-(IV)
- (4) (A)-(IV), (B)-(III), (C)-(I), (D)-(II)

**Options :**

- 212807112377. 1
- 212807112378. 2
- 212807112379. 3
- 212807112380. 4

Question Number : 145 Question Id : 21280728095 Question Type : MCQ Option Shuffling : No Is Question Mandatory : No Calculator : None Response Time : N.A Think Time : N.A Minimum Instruction Time : 0

Correct Marks : 5 Wrong Marks : 1

**Question Key Details :**

Key	Value
Comprehension	MCQ

**सूची - I का सूची - II के साथ मिलान कीजिए :**

**सूची - I**

- (A) लोकसभा का पहला स्पीकर (अध्यक्ष)
- (B) पहला भारतीय जिसे भारत रत्न पुरस्कार दिया गया
- (C) पहला भारतीय जिसे अर्थशास्त्र का नोबेल पुरस्कार प्राप्त हुआ
- (D) पहला भारतीय नोबेल पुरस्कार विजेता

**सूची - II**

- (I) डा. अमर्त्य सेन
- (II) जी.वी. मावलंकर
- (III) डा.एस. राधाकृष्णन
- (IV) रविद्रनाथ टैगोर

नीचे दिए गये विकल्पों में से **सही** उत्तर का चयन कीजिए :

- (1) (A)-(II), (B)-(III), (C)-(I), (D)-(IV)
- (2) (A)-(II), (B)-(III), (C)-(IV), (D)-(I)
- (3) (A)-(III), (B)-(II), (C)-(I), (D)-(IV)
- (4) (A)-(IV), (B)-(III), (C)-(I), (D)-(II)

**Options :**

- 212807112377. 1
- 212807112378. 2
- 212807112379. 3
- 212807112380. 4

Question Number : 146 Question Id : 21280728096 Question Type : MCQ Option Shuffling : No Is Question Mandatory : No Calculator : None Response Time : N.A Think Time : N.A Minimum Instruction Time : 0

Correct Marks : 5 Wrong Marks : 1

**Question Key Details :**

Key	Value
Comprehension	MCQ



Ministry of Health and Family Welfare has launched 'Nikshay Poshan Yojana' related to eradication of which of the following disease ?

- (1) Dengue
- (2) Malaria
- (3) Tuber colosis
- (4) Kala-Azar

Options :

212807112381. 1  
212807112382. 2  
212807112383. 3  
212807112384. 4

Question Number : 146 Question Id : 21280728096 Question Type : MCQ Option Shuffling : No Is Question Mandatory : No Calculator : None  
Response Time : N.A Think Time : N.A Minimum Instruction Time : 0

Correct Marks : 5 Wrong Marks : 1

Question Key Details :

Key	Value
Comprehension	MCQ

'स्वास्थ्य एवं परिवार कल्याण मंत्रालय' द्वारा स्थापित "निकश्य पोषण योजना" कौन सी बिमारी के उन्नमूलन के लिए शुरु की गई थी ?

- (1) डेंगू
- (2) मलेरिया
- (3) ट्यूबरक्लोसिस
- (4) काला-अजार

Options :

212807112381. 1  
212807112382. 2  
212807112383. 3  
212807112384. 4

Question Number : 147 Question Id : 21280728097 Question Type : MCQ Option Shuffling : No Is Question Mandatory : No Calculator : None  
Response Time : N.A Think Time : N.A Minimum Instruction Time : 0

Correct Marks : 5 Wrong Marks : 1

Question Key Details :

Key	Value
Comprehension	MCQ

The fibre crop which is known as the Golden Fibre ?

- (1) Cotton
- (2) Hump
- (3) Natural Silk
- (4) Jute

Options :

212807112385. 1  
212807112386. 2  
212807112387. 3  
212807112388. 4

Question Number : 147 Question Id : 21280728097 Question Type : MCQ Option Shuffling : No Is Question Mandatory : No Calculator : None  
Response Time : N.A Think Time : N.A Minimum Instruction Time : 0

Correct Marks : 5 Wrong Marks : 1

Question Key Details :

Key	Value
-----	-------

गोल्डेन फाइबर के नाम से प्रचलित फसल के रूप में किसे जाना जाता है ?

- (1) कपास
- (2) हम्म (सन)
- (3) प्राकृतिक रेष
- (4) जूट

**Options :**

212807112385. 1  
212807112386. 2  
212807112387. 3  
212807112388. 4

**Question Number : 148 Question Id : 21280728098 Question Type : MCQ Option Shuffling : No Is Question Mandatory : No Calculator : None Response Time : N.A Think Time : N.A Minimum Instruction Time : 0**

**Correct Marks : 5 Wrong Marks : 1**

**Question Key Details :**

Key	Value
Comprehension	MCQ

The Credit of inventing soap by using Mustard oil and some alkalies goes to which of the following scientist ?

- (1) Chakrapani
- (2) Sushruta
- (3) Nagarjuna
- (4) Patayjali

**Options :**

212807112389. 1  
212807112390. 2  
212807112391. 3  
212807112392. 4

**Question Number : 148 Question Id : 21280728098 Question Type : MCQ Option Shuffling : No Is Question Mandatory : No Calculator : None Response Time : N.A Think Time : N.A Minimum Instruction Time : 0**

**Correct Marks : 5 Wrong Marks : 1**

**Question Key Details :**

Key	Value
Comprehension	MCQ

सरसों के तेल और कुछ क्षारीय का उपयोग करके साबुन का अविष्कार करने का श्रेय निम्नलिखित में से किस वैज्ञानिक को जाता है ?

- (1) चक्रपाणि
- (2) सुश्रुत
- (3) नागार्जुन
- (4) पंतजलि

**Options :**

212807112389. 1  
212807112390. 2  
212807112391. 3  
212807112392. 4

**Question Number : 149 Question Id : 21280728099 Question Type : MCQ Option Shuffling : No Is Question Mandatory : No Calculator : None Response Time : N.A Think Time : N.A Minimum Instruction Time : 0**

**Correct Marks : 5 Wrong Marks : 1**

**Question Key Details :**

Key	Value
Comprehension	MCQ

**Match List - I with List - II.****List - I****(World Organization)**

- (A) BRICS  
(B) NATO  
(C) WTO  
(D) SAARC

**List - II****(Headquarters)**

- (I) Geneva (Switzerland)  
(II) Shanghai (China)  
(III) Kathmandu (Nepal)  
(IV) Brussels (Belgium)

Choose the **correct** answer from the options given below :

- (1) (A)-(III), (B)-(IV), (C)-(I), (D)-(II)  
(2) (A)-(IV), (B)-(II), (C)-(I), (D)-(III)  
(3) (A)-(II), (B)-(IV), (C)-(I), (D)-(III)  
(4) (A)-(II), (B)-(IV), (C)-(III), (D)-(I)

**Options :**

212807112393. 1  
212807112394. 2  
212807112395. 3  
212807112396. 4

**Question Number : 149 Question Id : 21280728099 Question Type : MCQ Option Shuffling : No Is Question Mandatory : No Calculator : None Response Time : N.A Think Time : N.A Minimum Instruction Time : 0**

**Correct Marks : 5 Wrong Marks : 1**

**Question Key Details :**

Key	Value
Comprehension	MCQ

**सूची - I का सूची - II के साथ मिलान कीजिए :**

**सूची-I****( विश्व संगठन )**

- (A) ब्रिक्स (BRICS)  
(B) नाटो (NATO)  
(C) डब्ल्यू.टी.ओ (WTO)  
(D) सार्क (SAARC)

**सूची-II****( मुख्यालय )**

- (I) जिनेवा (स्विट्जरलैंड)  
(II) शंघाई (चीन)  
(III) काठमांडू (नेपाल)  
(IV) ब्रुसेल (बेल्जियम)

नीचे दिए गये विकल्पों में से **सही** उत्तर का चयन कीजिए :

- (1) (A)-(III), (B)-(IV), (C)-(I), (D)-(II)  
(2) (A)-(IV), (B)-(II), (C)-(I), (D)-(III)  
(3) (A)-(II), (B)-(IV), (C)-(I), (D)-(III)  
(4) (A)-(II), (B)-(IV), (C)-(III), (D)-(I)

**Options :**

212807112393. 1  
212807112394. 2  
212807112395. 3  
212807112396. 4

Question Number : 150 Question Id : 21280728100 Question Type : MCQ Option Shuffling : No Is Question Mandatory : No Calculator : None  
Response Time : N.A Think Time : N.A Minimum Instruction Time : 0

Correct Marks : 5 Wrong Marks : 1

Question Key Details :

Key	Value
Comprehension	MCQ

The only continent through which Tropic of Cancer, Equator and Tropic of Capricorn passes ?

- (1) Asia
- (2) Australia
- (3) Antarctica
- (4) Africa

Options :

212807112397. 1  
212807112398. 2  
212807112399. 3  
212807112400. 4

Question Number : 150 Question Id : 21280728100 Question Type : MCQ Option Shuffling : No Is Question Mandatory : No Calculator : None  
Response Time : N.A Think Time : N.A Minimum Instruction Time : 0

Correct Marks : 5 Wrong Marks : 1

Question Key Details :

Key	Value
Comprehension	MCQ

कौन सा महाद्वीप है जिससे कर्करेखा, मकररेखा और भूमध्यरेखा गुजरती है ?

- (1) एशिया
- (2) ऑस्ट्रेलिया
- (3) अंटार्कटिका
- (4) अफ्रीका

Options :

212807112397. 1  
212807112398. 2  
212807112399. 3  
212807112400. 4

Question Number : 151 Question Id : 21280728101 Question Type : MCQ Option Shuffling : No Is Question Mandatory : No Calculator : None  
Response Time : N.A Think Time : N.A Minimum Instruction Time : 0

Correct Marks : 5 Wrong Marks : 1

Question Key Details :

Key	Value
Comprehension	MCQ

Given below are two statements :

**Statement (I) :** Right to information has been granted to every citizen of India under Right to information Act, 2005 which came into force on 12<sup>th</sup> October, 2005.

**Statement (II) :** Right to information is a fundamental Right.

In the light of the above statements, choose the **most appropriate** answer from the options given below :

- (1) Both **Statement I** and **Statement II** are true
- (2) Both **Statement I** and **Statement II** are false
- (3) **Statement I** is true but **Statement II** is false
- (4) **Statement I** is false but **Statement II** is true

Options :

212807112401. 1  
212807112402. 2  
212807112403. 3  
212807112404. 4

Question Number : 151 Question Id : 21280728101 Question Type : MCQ Option Shuffling : No Is Question Mandatory : No Calculator : None  
Response Time : N.A Think Time : N.A Minimum Instruction Time : 0

Correct Marks : 5 Wrong Marks : 1

Question Key Details :

Key	Value
Comprehension	MCQ

नीचे दो कथन दिए गए हैं:

**कथन (I) :** सूचना के अधिकार अधिनियम, 2005 के अंतर्गत भारत के प्रत्येक नागरिक को सूचना का अधिकार दिया गया है। जो 12 अक्टूबर, 2005 को लागू हुआ।

**कथन (II) :** सूचना का अधिकार एक मौलिक अधिकार है।

उपरोक्त कथन के आलोक में, नीचे दिए गए विकल्पों में से **सही उत्तर** चयन कीजिए :

- (1) कथन I और कथन II दोनों सत्य है
- (2) कथन I और कथन II दोनों असत्य है
- (3) कथन I सत्य है, लेकिन कथन II असत्य है
- (4) कथन I असत्य है, लेकिन कथन II सत्य है

Options :

212807112401. 1  
212807112402. 2  
212807112403. 3  
212807112404. 4

Question Number : 152 Question Id : 21280728102 Question Type : MCQ Option Shuffling : No Is Question Mandatory : No Calculator : None  
Response Time : N.A Think Time : N.A Minimum Instruction Time : 0

Correct Marks : 5 Wrong Marks : 1

Question Key Details :

Key	Value
Comprehension	MCQ

Match List - I with List - II.

**List - I**

**(Important Days)**

- |                          |                                |
|--------------------------|--------------------------------|
| (A) National Youth Day   | (I) 28 <sup>th</sup> February  |
| (B) Army Day             | (II) 12 <sup>th</sup> January  |
| (C) National Science Day | (III) 15 <sup>th</sup> January |
| (D) National Safety Day  | (IV) 4 <sup>th</sup> March     |

**List - II**

**(Date)**

Choose the **correct** answer from the options given below :

- (1) (A)-(II), (B)-(III), (C)-(IV), (D)-(I)
- (2) (A)-(II), (B)-(III), (C)-(I), (D)-(IV)
- (3) (A)-(III), (B)-(II), (C)-(I), (D)-(IV)
- (4) (A)-(IV), (B)-(III), (C)-(I), (D)-(II)

Options :

212807112405. 1  
212807112406. 2

212807112407.3  
212807112408.4

Question Number : 152 Question Id : 21280728102 Question Type : MCQ Option Shuffling : No Is Question Mandatory : No Calculator : None  
Response Time : N.A Think Time : N.A Minimum Instruction Time : 0  
Correct Marks : 5 Wrong Marks : 1

Question Key Details :

Key	Value
Comprehension	MCQ

सूची - I का सूची - II के साथ मिलान कीजिए :

सूची-I ( महत्वपूर्ण दिवस )	सूची-II ( तिथि )
(A) राष्ट्रीय युवा दिवस	(I) 28 <sup>th</sup> फरवरी
(B) सेना दिवस	(II) 12 <sup>th</sup> जनवरी
(C) राष्ट्रीय विज्ञान दिवस	(III) 15 <sup>th</sup> जनवरी
(D) राष्ट्रीय सुरक्षा दिवस	(IV) 4 <sup>th</sup> मार्च

नीचे दिए गए विकल्पों में से सही उत्तर का चयन कीजिए :

- (1) (A)-(II), (B)-(III), (C)-(IV), (D)-(I)
- (2) (A)-(II), (B)-(III), (C)-(I), (D)-(IV)
- (3) (A)-(III), (B)-(II), (C)-(I), (D)-(IV)
- (4) (A)-(IV), (B)-(III), (C)-(I), (D)-(II)

Options :

212807112405.1  
212807112406.2  
212807112407.3  
212807112408.4

Question Number : 153 Question Id : 21280728103 Question Type : MCQ Option Shuffling : No Is Question Mandatory : No Calculator : None  
Response Time : N.A Think Time : N.A Minimum Instruction Time : 0  
Correct Marks : 5 Wrong Marks : 1

Question Key Details :

Key	Value
Comprehension	MCQ

The first person to use crystal for radio wave detection was :

- (1) J.C. Bose
- (2) H.C. Verma
- (3) S.N. Bose
- (4) C.V. Raman

Options :

212807112409.1  
212807112410.2  
212807112411.3  
212807112412.4

Question Number : 153 Question Id : 21280728103 Question Type : MCQ Option Shuffling : No Is Question Mandatory : No Calculator : None  
Response Time : N.A Think Time : N.A Minimum Instruction Time : 0  
Correct Marks : 5 Wrong Marks : 1

Question Key Details :

Key	Value
Comprehension	MCQ

रेडियों तरंगों का पता लगाने के लिए क्रिस्टल का उपयोग करने वाला पहला व्यक्ति थे :

- (1) जी.सी. बोस
- (2) एच.सी. वर्मा
- (3) एस.एन. बोस
- (4) सी.वी. रमन

**Options :**

212807112409. 1  
212807112410. 2  
212807112411. 3  
212807112412. 4

**Question Number : 154 Question Id : 21280728104 Question Type : MCQ Option Shuffling : No Is Question Mandatory : No Calculator : None Response Time : N.A Think Time : N.A Minimum Instruction Time : 0**

**Correct Marks : 5 Wrong Marks : 1**

**Question Key Details :**

Key	Value
Comprehension	MCQ

Which of the planet have no satellite ?

- (A) Mercury
- (B) Neptune
- (C) Saturn
- (D) Venus

Choose the **correct** answer from the options given below :

- (1) (B) and (D) only
- (2) (A) and (B) only
- (3) (B), (C) and (D) only
- (4) (A) and (D) only

**Options :**

212807112413. 1  
212807112414. 2  
212807112415. 3  
212807112416. 4

**Question Number : 154 Question Id : 21280728104 Question Type : MCQ Option Shuffling : No Is Question Mandatory : No Calculator : None Response Time : N.A Think Time : N.A Minimum Instruction Time : 0**

**Correct Marks : 5 Wrong Marks : 1**

**Question Key Details :**

Key	Value
Comprehension	MCQ

कौन से ग्रह का कोई उपग्रह नहीं है।

- (A) बुध
- (B) तरुण
- (C) शनि
- (D) शुक्र

नीचे दिए गए विकल्पों में से सही उत्तर का चयन कीजिए :

- (1) केवल (B) और (D)
- (2) केवल (A) और (B)
- (3) केवल (B), (C) और (D)
- (4) केवल (A) और (D)

**Options :**

- 212807112413. 1
- 212807112414. 2
- 212807112415. 3
- 212807112416. 4

**Question Number : 155 Question Id : 21280728105 Question Type : MCQ Option Shuffling : No Is Question Mandatory : No Calculator : None Response Time : N.A Think Time : N.A Minimum Instruction Time : 0**

**Correct Marks : 5 Wrong Marks : 1**

**Question Key Details :**

Key	Value
Comprehension	MCQ

ISRO Launched "GSAT-6A" satellites on :

- (1) 31 August, 2017
- (2) 29 March, 2018
- (3) 05 June, 2017
- (4) 12 January, 2018

**Options :**

- 212807112417. 1
- 212807112418. 2
- 212807112419. 3
- 212807112420. 4

**Question Number : 155 Question Id : 21280728105 Question Type : MCQ Option Shuffling : No Is Question Mandatory : No Calculator : None Response Time : N.A Think Time : N.A Minimum Instruction Time : 0**

**Correct Marks : 5 Wrong Marks : 1**

**Question Key Details :**

Key	Value
Comprehension	MCQ

जीसैट (GSAT)-6A इसरो के द्वारा कब प्रक्षेपित किया गया :

- (1) 31 अगस्त, 2017
- (2) 29 मार्च, 2018
- (3) 05 जून, 2017
- (4) 12 जनवरी, 2018

**Options :**

- 212807112417. 1
- 212807112418. 2
- 212807112419. 3



Question Number : 156 Question Id : 21280728106 Question Type : MCQ Option Shuffling : No Is Question Mandatory : No Calculator : None  
Response Time : N.A Think Time : N.A Minimum Instruction Time : 0

Correct Marks : 5 Wrong Marks : 1

Question Key Details :

Key	Value
Comprehension	MCQ

Match List - I with List - II.

List - I (Name of City)	List - II (Famous for production of)
(A) Ahmedabad	(I) Machine tools
(B) Bangalore	(II) Aluminium
(C) Bhilai	(III) Textiles
(D) Renukoot	(IV) Steel

Choose the **correct** answer from the options given below :

- (1) (A)-(I), (B)-(II), (C)-(III), (D)-(IV)
- (2) (A)-(II), (B)-(III), (C)-(IV), (D)-(I)
- (3) (A)-(III), (B)-(I), (C)-(IV), (D)-(II)
- (4) (A)-(IV), (B)-(III), (C)-(II), (D)-(I)

Options :

212807112421. 1  
212807112422. 2  
212807112423. 3  
212807112424. 4

Question Number : 156 Question Id : 21280728106 Question Type : MCQ Option Shuffling : No Is Question Mandatory : No Calculator : None  
Response Time : N.A Think Time : N.A Minimum Instruction Time : 0

Correct Marks : 5 Wrong Marks : 1

Question Key Details :

Key	Value
Comprehension	MCQ

सूची-I से सूची-II का मिलान कीजिए :

सूची-I ( शहर के नाम )	सूची-II ( उत्पादन के लिए प्रसिद्ध )
(A) अहमदबाद	(I) मशीन टूल
(B) बंगलौर	(II) एल्युमिनियम
(C) भिलाई	(III) टेक्सटाइल
(D) रेनुकूट	(IV) स्टील

नीचे दिए गए विकल्पों में से **सही** उत्तर का चयन कीजिए :

- (1) (A)-(I), (B)-(II), (C)-(III), (D)-(IV)
- (2) (A)-(II), (B)-(III), (C)-(IV), (D)-(I)
- (3) (A)-(III), (B)-(I), (C)-(IV), (D)-(II)
- (4) (A)-(IV), (B)-(III), (C)-(II), (D)-(I)

Options :

212807112421. 1

212807112422. 2  
212807112423. 3  
212807112424. 4

**Question Number : 157 Question Id : 21280728107 Question Type : MCQ Option Shuffling : No Is Question Mandatory : No Calculator : None Response Time : N.A Think Time : N.A Minimum Instruction Time : 0**

**Correct Marks : 5 Wrong Marks : 1**

**Question Key Details :**

Key	Value
Comprehension	MCQ

The constitution authorises the president to make provisions for discharge of duties of Governor in extraordinary circumstances under the \_\_\_\_\_.

- (1) Article 160
- (2) Article 162
- (3) Article 165
- (4) Article 310

**Options :**

212807112425. 1  
212807112426. 2  
212807112427. 3  
212807112428. 4

**Question Number : 157 Question Id : 21280728107 Question Type : MCQ Option Shuffling : No Is Question Mandatory : No Calculator : None Response Time : N.A Think Time : N.A Minimum Instruction Time : 0**

**Correct Marks : 5 Wrong Marks : 1**

**Question Key Details :**

Key	Value
Comprehension	MCQ

संविधान राष्ट्रपति को असाधारण परिस्थितियों में राज्यपाल के कर्तव्यों के निर्वहन करने के लिए प्रावधान \_\_\_\_\_ अधिकृत करता है।

- (1) अनुच्छेद 160
- (2) अनुच्छेद 162
- (3) अनुच्छेद 165
- (4) अनुच्छेद 310

**Options :**

212807112425. 1  
212807112426. 2  
212807112427. 3  
212807112428. 4

**Question Number : 158 Question Id : 21280728108 Question Type : MCQ Option Shuffling : No Is Question Mandatory : No Calculator : None Response Time : N.A Think Time : N.A Minimum Instruction Time : 0**

**Correct Marks : 5 Wrong Marks : 1**

**Question Key Details :**

Key	Value
Comprehension	MCQ

Who was the Chief Justice of India when public interest litigation (PIL) was introduced to the Indian Judicial system ?

- (1) M. Hidayatullah
- (2) A.M. Ahmadi
- (3) P.N. Bhagwati
- (4) A.S. Anand

**Options :**

212807112429. 1  
 212807112430. 2  
 212807112431. 3  
 212807112432. 4

**Question Number : 158 Question Id : 21280728108 Question Type : MCQ Option Shuffling : No Is Question Mandatory : No Calculator : None Response Time : N.A Think Time : N.A Minimum Instruction Time : 0**

**Correct Marks : 5 Wrong Marks : 1**

**Question Key Details :**

Key	Value
Comprehension	MCQ

भारतीय न्यायिक प्रणाली जब जनहित याचिका (PIL) को लागू किया गया था उस समय भारत के मुख्य न्यायधीश कौन थे ?

- (1) एम.हिदायतुल्ला  
 (2) ए.एम. अहमदी  
 (3) पी.एन. भगवती  
 (4) ए.एस. आनंद

**Options :**

212807112429. 1  
 212807112430. 2  
 212807112431. 3  
 212807112432. 4

**Question Number : 159 Question Id : 21280728109 Question Type : MCQ Option Shuffling : No Is Question Mandatory : No Calculator : None Response Time : N.A Think Time : N.A Minimum Instruction Time : 0**

**Correct Marks : 5 Wrong Marks : 1**

**Question Key Details :**

Key	Value
Comprehension	MCQ

Given below are two statements : one is labelled as **Assertion (A)** and the other is labelled as **Reason (R)**.

**Assertion (A) :** Polar areas have high atmospheric pressure.

**Reason (R) :** These areas receive minimum sunshine throughout the year.

In the light of the above statements, choose the **most appropriate** answer from the options given below :

- (1) Both **(A)** and **(R)** are correct and **(R)** is the correct explanation of **(A)**  
 (2) Both **(A)** and **(R)** are true but **(R)** is **not** the correct explanation of **(A)**  
 (3) **(A)** is true but **(R)** is false  
 (4) **(A)** is false but **(R)** is true

**Options :**

212807112433. 1  
 212807112434. 2  
 212807112435. 3  
 212807112436. 4

**Question Number : 159 Question Id : 21280728109 Question Type : MCQ Option Shuffling : No Is Question Mandatory : No Calculator : None Response Time : N.A Think Time : N.A Minimum Instruction Time : 0**

**Correct Marks : 5 Wrong Marks : 1**

**Question Key Details :**

Key	Value
Comprehension	MCQ

नीचे दो कथन दिए गए हैं: एक **अभिकथन (A)** के रूप में लिखित है तो दूसरा उसके **कारण (R)** के रूप में है।

**अभिकथन (A) :** ध्रुवीय क्षेत्रों पर उच्च वायुमण्डलीय दबाव होते हैं।

**कारण (R) :** यह क्षेत्र वर्ष भर न्यूनतम प्रकाश प्राप्त करता है।

उपरोक्त कथन के प्रकाश में, नीचे दिए गए विकल्पों में से **सही उत्तर** चयन कीजिए:

- (1) (A) तथा (R) दोनों सही हैं तथा (R), (A) की सही व्याख्या है
- (2) (A) तथा (R) दोनों सही हैं लेकिन (R), (A) की सही व्याख्या नहीं है
- (3) (A) सही है, लेकिन (R) सही नहीं है
- (4) (A) सही नहीं है लेकिन (R) सही है

**Options :**

- 212807112433. 1
- 212807112434. 2
- 212807112435. 3
- 212807112436. 4

**Question Number : 160 Question Id : 21280728110 Question Type : MCQ Option Shuffling : No Is Question Mandatory : No Calculator : None Response Time : N.A Think Time : N.A Minimum Instruction Time : 0**

**Correct Marks : 5 Wrong Marks : 1**

**Question Key Details :**

Key	Value
Comprehension	MCQ

The first satellite in space was launched by :

- (1) U.S.A.
- (2) United Kingdom
- (3) U.S.S.R.
- (4) France

**Options :**

- 212807112437. 1
- 212807112438. 2
- 212807112439. 3
- 212807112440. 4

**Question Number : 160 Question Id : 21280728110 Question Type : MCQ Option Shuffling : No Is Question Mandatory : No Calculator : None Response Time : N.A Think Time : N.A Minimum Instruction Time : 0**

**Correct Marks : 5 Wrong Marks : 1**

**Question Key Details :**

Key	Value
Comprehension	MCQ

अंतरिक्ष में पहला उपग्रह किसके द्वारा छोड़ा गया :

- (1) यू.एस.ए.
- (2) यूनाइटेड किंगडम
- (3) यू.एस.एस.आर
- (4) फ्रांस

**Options :**

- 212807112437. 1
- 212807112438. 2
- 212807112439. 3
- 212807112440. 4