

National Testing Agency

Question Paper Name : 01 07062023
Subject Name : 07Jun2023 Shift1 Subject Combination 1
Creation Date : 2023-06-07 13:41:03
Duration : 105
Total Marks : 450
Display Marks: Yes

English

Group Number : 1
Group Id : 540250261
Group Maximum Duration : 45
Group Minimum Duration : 45
Show Attended Group? : No
Edit Attended Group? : No
Break time : 0
Group Marks : 200
Is this Group for Examiner? : No
Examiner permission : Cant View
Show Progress Bar? : No

English

Section Id : 540250317
Section Number : 1
Section type : Online
Mandatory or Optional : Mandatory
Number of Questions : 50
Number of Questions to be attempted : 40
Section Marks : 200
Enable Mark as Answered Mark for Review and Clear Response : Yes
Maximum Instruction Time : 0
Sub-Section Number : 1
Sub-Section Id : 540250876
Question Shuffling Allowed : No
Is Section Default? : null

**Question Number : 1 Question Id : 54025014051 Question Type : MCQ Option Shuffling : No Is Question Mandatory : No Calculator : None
Response Time : N.A Think Time : N.A Minimum Instruction Time : 0
Correct Marks : 5 Wrong Marks : 1**

Question Key Details :

Key	Value
Comprehension	Comp1

Read the following poem given below and answer the question.

LOVE AND A QUESTION

A STRANGER came to the door at eve,
And he spoke the bridegroom fair.
He bore a green-white stick in his hand,
And, for all burden, care.
He asked with the eyes more than the lips
For a shelter for the night,
And he turned and looked at the road afar
Without a window light.

The bridegroom came forth into the porch
With "Let us look at the sky,
And question what of the night to be,
Stranger, you and I."
The woodbine leaves littered the yard,
The woodbine berries were blue,
Autumn, yes, winter was in the wind;
"Stranger, I wish I knew."

Within, the bride in the dusk alone
Bent over the open fire,
Her face rose-red with the glowing coal
And the thought of the heart's desire.
The bridegroom looked at the weary road,
Yet saw but her within,
And wished her heart in a case of gold
And pinned with a silver pin.

The bridegroom thought it little to give
a dole of bread, a purse,
A heartfelt prayer for the poor of God,
Or for the rich a curse,
But whether or not a man was asked
To mar the love of two
By harboring woe in the bridal house,
The bridegroom wished he knew.

The mood of the poem is :

- (1) Sombre and heavy
- (2) Cheerful
- (3) Celebratory
- (4) Sad and dark

Options :

54025056201. 1
54025056202. 2
54025056203. 3
54025056204. 4

Question Number : 2 Question Id : 54025014052 Question Type : MCQ Option Shuffling : No Is Question Mandatory : No Calculator : None
Response Time : N.A Think Time : N.A Minimum Instruction Time : 0

Correct Marks : 5 Wrong Marks : 1

Question Key Details :

Key	Value
Comprehension	Compl

Read the following poem given below and answer the question.

LOVE AND A QUESTION

A STRANGER came to the door at eve,
And he spoke the bridegroom fair.
He bore a green-white stick in his hand,
And, for all burden, care.
He asked with the eyes more than the lips
For a shelter for the night,
And he turned and looked at the road afar
Without a window light.

The bridegroom came forth into the porch
With "Let us look at the sky,
And question what of the night to be,
Stranger, you and I."
The woodbine leaves littered the yard,
The woodbine berries were blue,
Autumn, yes, winter was in the wind;
"Stranger, I wish I knew."

Within, the bride in the dusk alone
Bent over the open fire,
Her face rose-red with the glowing coal
And the thought of the heart's desire.
The bridegroom looked at the weary road,
Yet saw but her within,
And wished her heart in a case of gold
And pinned with a silver pin.

The bridegroom thought it little to give
a dole of bread, a purse,
A heartfelt prayer for the poor of God,
Or for the rich a curse,
But whether or not a man was asked
To mar the love of two
By harboring woe in the bridal house,
The bridegroom wished he knew.

The poem ends with the bridegroom :

- (1) Welcoming the stranger into the house
- (2) Reflecting on his decision
- (3) Celebrating the marriage with his bride
- (4) Praying for the stranger

Options :

54025056205. 1
54025056206. 2
54025056207. 3
54025056208. 4

Question Number : 3 Question Id : 54025014053 Question Type : MCQ Option Shuffling : No Is Question Mandatory : No Calculator : None
Response Time : N.A Think Time : N.A Minimum Instruction Time : 0

Correct Marks : 5 Wrong Marks : 1

Question Key Details :

Key	Value
Comprehension	Compl

Read the following poem given below and answer the question.

LOVE AND A QUESTION

A STRANGER came to the door at eve,
And he spoke the bridegroom fair.
He bore a green-white stick in his hand,
And, for all burden, care.
He asked with the eyes more than the lips
For a shelter for the night,
And he turned and looked at the road afar
Without a window light.

The bridegroom came forth into the porch
With "Let us look at the sky,
And question what of the night to be,
Stranger, you and I."
The woodbine leaves littered the yard,
The woodbine berries were blue,
Autumn, yes, winter was in the wind;
"Stranger, I wish I knew."

Within, the bride in the dusk alone
Bent over the open fire,
Her face rose-red with the glowing coal
And the thought of the heart's desire.
The bridegroom looked at the weary road,
Yet saw but her within,
And wished her heart in a case of gold
And pinned with a silver pin.

The bridegroom thought it little to give
a dole of bread, a purse,
A heartfelt prayer for the poor of God,
Or for the rich a curse,
But whether or not a man was asked
To mar the love of two
By harboring woe in the bridal house,
The bridegroom wished he knew.

The line, "He asked with the eyes more than the lips", means the eyes were

- (1) Inquisitive
- (2) Pleading
- (3) Sparkling
- (4) Lonely

Options :

- 54025056209. 1
- 54025056210. 2
- 54025056211. 3
- 54025056212. 4

Question Number : 4 Question Id : 54025014054 Question Type : MCQ Option Shuffling : No Is Question Mandatory : No Calculator : None
Response Time : N.A Think Time : N.A Minimum Instruction Time : 0

Correct Marks : 5 Wrong Marks : 1

Question Key Details :

Key	Value
Comprehension	Compl

Read the following poem given below and answer the question.

LOVE AND A QUESTION

A STRANGER came to the door at eve,
And he spoke the bridegroom fair.
He bore a green-white stick in his hand,
And, for all burden, care.
He asked with the eyes more than the lips
For a shelter for the night,
And he turned and looked at the road afar
Without a window light.

The bridegroom came forth into the porch
With "Let us look at the sky,
And question what of the night to be,
Stranger, you and I."
The woodbine leaves littered the yard,
The woodbine berries were blue,
Autumn, yes, winter was in the wind;
"Stranger, I wish I knew."

Within, the bride in the dusk alone
Bent over the open fire,
Her face rose-red with the glowing coal
And the thought of the heart's desire.
The bridegroom looked at the weary road,
Yet saw but her within,
And wished her heart in a case of gold
And pinned with a silver pin.

The bridegroom thought it little to give
a dole of bread, a purse,
A heartfelt prayer for the poor of God,
Or for the rich a curse,
But whether or not a man was asked
To mar the love of two
By harboring woe in the bridal house,
The bridegroom wished he knew.

The phrase 'weary road' is an example of :

- (1) Simile
- (2) Personification
- (3) Metaphor
- (4) Transferred epithet

Options :

54025056213. 1
54025056214. 2
54025056215. 3
54025056216. 4

Question Number : 5 Question Id : 54025014055 Question Type : MCQ Option Shuffling : No Is Question Mandatory : No Calculator : None
Response Time : N.A Think Time : N.A Minimum Instruction Time : 0

Correct Marks : 5 Wrong Marks : 1

Question Key Details :

Key	Value
Comprehension	Compl

Read the following poem given below and answer the question.

LOVE AND A QUESTION

A STRANGER came to the door at eve,
And he spoke the bridegroom fair.
He bore a green-white stick in his hand,
And, for all burden, care.
He asked with the eyes more than the lips
For a shelter for the night,
And he turned and looked at the road afar
Without a window light.

The bridegroom came forth into the porch
With "Let us look at the sky,
And question what of the night to be,
Stranger, you and I."
The woodbine leaves littered the yard,
The woodbine berries were blue,
Autumn, yes, winter was in the wind;
"Stranger, I wish I knew."

Within, the bride in the dusk alone
Bent over the open fire,
Her face rose-red with the glowing coal
And the thought of the heart's desire.
The bridegroom looked at the weary road,
Yet saw but her within,
And wished her heart in a case of gold
And pinned with a silver pin.

The bridegroom thought it little to give
a dole of bread, a purse,
A heartfelt prayer for the poor of God,
Or for the rich a curse,
But whether or not a man was asked
To mar the love of two
By harboring woe in the bridal house,
The bridegroom wished he knew.

Match List - I with List - II.

- | List - I
(Aspects in poem) | List - II
(Stanzas) |
|-------------------------------------------------------------|------------------------|
| (A) Contrast between the warm house
and cold outside | (I) Stanza II |
| (B) Ethical dilemma of the bridegroom | (II) Stanza III |
| (C) Eerie atmosphere due to dark night
and harsh weather | (III) Stanza I |
| (D) The stranger's mental state | (IV) Stanza IV |

Choose the correct answer from the options given below :

- (1) (A)-(III), (B)-(II), (C)-(I), (D)-(IV)
- (2) (A)-(II), (B)-(IV), (C)-(I), (D)-(III)
- (3) (A)-(III), (B)-(IV), (C)-(I), (D)-(II)
- (4) (A)-(II), (B)-(I), (C)-(IV), (D)-(III)

Options :

54025056217. 1
54025056218. 2
54025056219. 3
54025056220. 4

Sub-Section Number : 2
Sub-Section Id : 540250877
Question Shuffling Allowed : No
Is Section Default? : null

Question Number : 6 Question Id : 54025014056 Question Type : MCQ Option Shuffling : No Is Question Mandatory : No Calculator : None
Response Time : N.A Think Time : N.A Minimum Instruction Time : 0
Correct Marks : 5 Wrong Marks : 1

Question Key Details :

Key	Value
Comprehension	Comp2

Read the following passage given below and answer the question.

We humans walk with two legs (called 'bipedal') and use two hands. The evolution of bipedalism began in our ancestors, the primates, about 4 million years ago. The primates not only gave us our blood groups, but our two feet and two hands as well. Primates exhibit characteristics that distinguish them from less evolved mammals. These include adaptations to live in trees (as monkeys do), big brains, heightened sense of vision, opposable thumbs to grasp the four fingers in each hand, and more flexibility in shoulder movements.

Dr. Tetsuro Matsuzawa of the Kyoto University, Japan, writes that the shared ancestor primates moved into tree tops and developed four hands from the four legs possessed by the terrestrial ancestor. This was an adaptation to arboreal life; enabling the efficient grasping of branches and tree-trunks. Subsequently, early human ancestors left the trees to start walking long distances across the land, bipedally. Thus, we created two feet from four hands during the course of evolution from our primate ancestors.

The anthropologist Carol Ward of the University of Missouri, US points out that the way we humans get around the world is different from any other animal on earth. We move around on the ground, upright on two feet, but in a unique way: with one foot after the other; holding our body fully upright in a characteristic series of motions. So, it's a big deal to figure out how and why we walk the way we do, and how our lineage really diverged so much from ape like creatures.

The human brain is about three times as big as the brain of our closest living relative, the chimpanzee. Moreover, a part of our brain, called the cerebral cortex - which plays a key role in memory, attention, awareness and thought - contains twice as many cells as the same region in chimpanzees. We are, thus, smarter than apes.

As per the passage, which of the following *does not* make the primates different from their ancestors :

- (1) Taste buds
- (2) Bipedalism
- (3) Flexible shoulder movements
- (4) Bigger brains

Options :

54025056221. 1

54025056222. 2

54025056223. 3

54025056224. 4

Question Number : 7 Question Id : 54025014057 Question Type : MCQ Option Shuffling : No Is Question Mandatory : No Calculator : None

Response Time : N.A Think Time : N.A Minimum Instruction Time : 0

Correct Marks : 5 Wrong Marks : 1

Question Key Details :

Key	Value
Comprehension	Comp2

Read the following passage given below and answer the question.

We humans walk with two legs (called 'bipedal') and use two hands. The evolution of bipedalism began in our ancestors, the primates, about 4 million years ago. The primates not only gave us our blood groups, but our two feet and two hands as well. Primates exhibit characteristics that distinguish them from less evolved mammals. These include adaptations to live in trees (as monkeys do), big brains, heightened sense of vision, opposable thumbs to grasp the four fingers in each hand, and more flexibility in shoulder movements.

Dr. Tetsuro Matsuzawa of the Kyoto University, Japan, writes that the shared ancestor primates moved into tree tops and developed four hands from the four legs possessed by the terrestrial ancestor. This was an adaptation to arboreal life; enabling the efficient grasping of branches and tree-trunks. Subsequently, early human ancestors left the trees to start walking long distances across the land, bipedally. Thus, we created two feet from four hands during the course of evolution from our primate ancestors.

The anthropologist Carol Ward of the University of Missouri, US points out that the way we humans get around the world is different from any other animal on earth. We move around on the ground, upright on two feet, but in a unique way: with one foot after the other; holding our body fully upright in a characteristic series of motions. So, it's a big deal to figure out how and why we walk the way we do, and how our lineage really diverged so much from ape like creatures.

The human brain is about three times as big as the brain of our closest living relative, the chimpanzee. Moreover, a part of our brain, called the cerebral cortex - which plays a key role in memory, attention, awareness and thought - contains twice as many cells as the same region in chimpanzees. We are, thus, smarter than apes.

The word 'arboreal' means :

- (1) crawling movement
- (2) related to water and trees
- (3) relating to trees
- (4) tendency to jump

Options :

54025056225. 1
54025056226. 2
54025056227. 3
54025056228. 4

**Question Number : 8 Question Id : 54025014058 Question Type : MCQ Option Shuffling : No Is Question Mandatory : No Calculator : None
Response Time : N.A Think Time : N.A Minimum Instruction Time : 0
Correct Marks : 5 Wrong Marks : 1**

Question Key Details :

Key	Value
Comprehension	Comp2

Read the following passage given below and answer the question.

We humans walk with two legs (called 'bipedal') and use two hands. The evolution of bipedalism began in our ancestors, the primates, about 4 million years ago. The primates not only gave us our blood groups, but our two feet and two hands as well. Primates exhibit characteristics that distinguish them from less evolved mammals. These include adaptations to live in trees (as monkeys do), big brains, heightened sense of vision, opposable thumbs to grasp the four fingers in each hand, and more flexibility in shoulder movements.

Dr. Tetsuro Matsuzawa of the Kyoto University, Japan, writes that the shared ancestor primates moved into tree tops and developed four hands from the four legs possessed by the terrestrial ancestor. This was an adaptation to arboreal life; enabling the efficient grasping of branches and tree-trunks. Subsequently, early human ancestors left the trees to start walking long distances across the land, bipedally. Thus, we created two feet from four hands during the course of evolution from our primate ancestors.

The anthropologist Carol Ward of the University of Missouri, US points out that the way we humans get around the world is different from any other animal on earth. We move around on the ground, upright on two feet, but in a unique way: with one foot after the other; holding our body fully upright in a characteristic series of motions. So, it's a big deal to figure out how and why we walk the way we do, and how our lineage really diverged so much from ape like creatures.

The human brain is about three times as big as the brain of our closest living relative, the chimpanzee. Moreover, a part of our brain, called the cerebral cortex - which plays a key role in memory, attention, awareness and thought - contains twice as many cells as the same region in chimpanzees. We are, thus, smarter than apes.

'Subsequently' means the same as :

- (1) As opposed to
- (2) As a consequence of
- (3) Afterwards
- (4) Without any significance

Options :

54025056229. 1
54025056230. 2
54025056231. 3
54025056232. 4

**Question Number : 9 Question Id : 54025014059 Question Type : MCQ Option Shuffling : No Is Question Mandatory : No Calculator : None
Response Time : N.A Think Time : N.A Minimum Instruction Time : 0
Correct Marks : 5 Wrong Marks : 1**

Question Key Details :

Key	Value
Comprehension	Comp2

Read the following passage given below and answer the question.

We humans walk with two legs (called 'bipedal') and use two hands. The evolution of bipedalism began in our ancestors, the primates, about 4 million years ago. The primates not only gave us our blood groups, but our two feet and two hands as well. Primates exhibit characteristics that distinguish them from less evolved mammals. These include adaptations to live in trees (as monkeys do), big brains, heightened sense of vision, opposable thumbs to grasp the four fingers in each hand, and more flexibility in shoulder movements.

Dr. Tetsuro Matsuzawa of the Kyoto University, Japan, writes that the shared ancestor primates moved into tree tops and developed four hands from the four legs possessed by the terrestrial ancestor. This was an adaptation to arboreal life; enabling the efficient grasping of branches and tree-trunks. Subsequently, early human ancestors left the trees to start walking long distances across the land, bipedally. Thus, we created two feet from four hands during the course of evolution from our primate ancestors.

The anthropologist Carol Ward of the University of Missouri, US points out that the way we humans get around the world is different from any other animal on earth. We move around on the ground, upright on two feet, but in a unique way: with one foot after the other; holding our body fully upright in a characteristic series of motions. So, it's a big deal to figure out how and why we walk the way we do, and how our lineage really diverged so much from ape like creatures.

The human brain is about three times as big as the brain of our closest living relative, the chimpanzee. Moreover, a part of our brain, called the cerebral cortex - which plays a key role in memory, attention, awareness and thought - contains twice as many cells as the same region in chimpanzees. We are, thus, smarter than apes.

Which options *don't* correctly explain why humans are smarter than apes. (as per the passage)

- (A) Apes have a bigger brain size.
- (B) Humans have a better memory.
- (C) Humans can walk with only 2 legs.
- (D) Human's ability to process thoughts is more.
- (E) Apes can climb trees.

Choose the **correct** answer from the options given below :

- (1) (A) and (E) Only
- (2) (A) and (C) Only
- (3) (A), (C) and (E) Only
- (4) (C) and (E) Only

Options :

- 54025056233. 1
- 54025056234. 2
- 54025056235. 3
- 54025056236. 4

Question Number : 10 Question Id : 54025014060 Question Type : MCQ Option Shuffling : No Is Question Mandatory : No Calculator : None
Response Time : N.A Think Time : N.A Minimum Instruction Time : 0
Correct Marks : 5 Wrong Marks : 1

Question Key Details :

Key	Value
Comprehension	Comp2

Read the following passage given below and answer the question.

We humans walk with two legs (called 'bipedal') and use two hands. The evolution of bipedalism began in our ancestors, the primates, about 4 million years ago. The primates not only gave us our blood groups, but our two feet and two hands as well. Primates exhibit characteristics that distinguish them from less evolved mammals. These include adaptations to live in trees (as monkeys do), big brains, heightened sense of vision, opposable thumbs to grasp the four fingers in each hand, and more flexibility in shoulder movements.

Dr. Tetsuro Matsuzawa of the Kyoto University, Japan, writes that the shared ancestor primates moved into tree tops and developed four hands from the four legs possessed by the terrestrial ancestor. This was an adaptation to arboreal life; enabling the efficient grasping of branches and tree-trunks. Subsequently, early human ancestors left the trees to start walking long distances across the land, bipedally. Thus, we created two feet from four hands during the course of evolution from our primate ancestors.

The anthropologist Carol Ward of the University of Missouri, US points out that the way we humans get around the world is different from any other animal on earth. We move around on the ground, upright on two feet, but in a unique way: with one foot after the other; holding our body fully upright in a characteristic series of motions. So, it's a big deal to figure out how and why we walk the way we do, and how our lineage really diverged so much from ape like creatures.

The human brain is about three times as big as the brain of our closest living relative, the chimpanzee. Moreover, a part of our brain, called the cerebral cortex - which plays a key role in memory, attention, awareness and thought - contains twice as many cells as the same region in chimpanzees. We are, thus, smarter than apes.

Which of the following words means the same as 'diverge'?

- (1) Intersect
- (2) Separate
- (3) Divulge
- (4) Synchronize

Options :

54025056237. 1

54025056238. 2

54025056239. 3

54025056240. 4

Sub-Section Number :

3

Sub-Section Id :

540250878

Question Shuffling Allowed :

No

Is Section Default? :

null

Question Number : 11 Question Id : 54025014061 Question Type : MCQ Option Shuffling : No Is Question Mandatory : No Calculator : None
Response Time : N.A Think Time : N.A Minimum Instruction Time : 0

Correct Marks : 5 Wrong Marks : 1

Question Key Details :

Key	Value
Comprehension	Comp3

Read the following passage given below and answer the question.

Off to the right we hear the distinct 'bleep-bleep' - the alarm call of the chital, or spotted deer, announcing the presence of a predator. Kuttapan and Gautam go off to investigate and we begin to drive around to intercept them on the other side of the forest. Not ten metres down the road, we hear a loud 'varoom' - the call of the tiger - and we slide to a halt on the dusty road. Walking directly towards us at a distance of 100 metres is a large male tiger. It is one of the three-year-old males known to share this territory with his brother.

The tiger continued his casual stroll directly towards us.

When the tiger is about 50 metres past us, our reverie is broken by a commotion in the forest across the road. Anil, our guide, whispers loudly, 'Wolves!' There, propped up like little statues in a clearing in the forest, are two Indian grey wolves. Rigid, alert, clearly in a state of alarm and agitation, they begin yelping at the tiger. The tiger spins around on the road and charges off into the forest after them.

This time the tiger turns round and glowers at the wolf, probably assessing the distance between them and the speed it would take to catch the wolf. The muscles of the tiger begin to twitch and off goes the wolf into the forest again. Finally, after one more of these encounters, the tiger moves some distance away and the wolf disappears into the forest for one last time. We can only assume that the aggressive and bold behaviour of the wolf meant he was protecting some cubs and wanted to be sure the tiger was driven out of his territory.

The tiger, now left in peace, continues his stroll.

Whose presence is announced in the beginning ?

- (1) Chital
- (2) Tiger
- (3) Kuttapan
- (4) Gautam

Options :

- 54025056241. 1
- 54025056242. 2
- 54025056243. 3
- 54025056244. 4

Question Number : 12 Question Id : 54025014062 Question Type : MCQ Option Shuffling : No Is Question Mandatory : No Calculator : None Response Time : N.A Think Time : N.A Minimum Instruction Time : 0

Correct Marks : 5 Wrong Marks : 1

Question Key Details :

Key	Value
Comprehension	Comp3

Read the following passage given below and answer the question.

Off to the right we hear the distinct 'bleep-bleep' - the alarm call of the chital, or spotted deer, announcing the presence of a predator. Kuttapan and Gautam go off to investigate and we begin to drive around to intercept them on the other side of the forest. Not ten metres down the road, we hear a loud 'varoom' - the call of the tiger - and we slide to a halt on the dusty road. Walking directly towards us at a distance of 100 metres is a large male tiger. It is one of the three-year-old males known to share this territory with his brother.

The tiger continued his casual stroll directly towards us.

When the tiger is about 50 metres past us, our reverie is broken by a commotion in the forest across the road. Anil, our guide, whispers loudly, 'Wolves!' There, propped up like little statues in a clearing in the forest, are two Indian grey wolves. Rigid, alert, clearly in a state of alarm and agitation, they begin yelping at the tiger. The tiger spins around on the road and charges off into the forest after them.

This time the tiger turns round and glowers at the wolf, probably assessing the distance between them and the speed it would take to catch the wolf. The muscles of the tiger begin to twitch and off goes the wolf into the forest again. Finally, after one more of these encounters, the tiger moves some distance away and the wolf disappears into the forest for one last time. We can only assume that the aggressive and bold behaviour of the wolf meant he was protecting some cubs and wanted to be sure the tiger was driven out of his territory.

The tiger, now left in peace, continues his stroll.

The above passage describes an encounter between _____.

- (1) the tiger and hunters
- (2) the wolves and the hunters
- (3) the tiger and the wolves
- (4) wolf and its cubs

Options :

54025056245. 1
54025056246. 2
54025056247. 3
54025056248. 4

Question Number : 13 Question Id : 54025014063 Question Type : MCQ Option Shuffling : No Is Question Mandatory : No Calculator : None Response Time : N.A Think Time : N.A Minimum Instruction Time : 0

Correct Marks : 5 Wrong Marks : 1

Question Key Details :

Key	Value
Comprehension	Comp3

Read the following passage given below and answer the question.

Off to the right we hear the distinct 'bleep-bleep' - the alarm call of the chital, or spotted deer, announcing the presence of a predator. Kuttapan and Gautam go off to investigate and we begin to drive around to intercept them on the other side of the forest. Not ten metres down the road, we hear a loud 'varoom' - the call of the tiger - and we slide to a halt on the dusty road. Walking directly towards us at a distance of 100 metres is a large male tiger. It is one of the three-year-old males known to share this territory with his brother.

The tiger continued his casual stroll directly towards us.

When the tiger is about 50 metres past us, our reverie is broken by a commotion in the forest across the road. Anil, our guide, whispers loudly, 'Wolves!' There, propped up like little statues in a clearing in the forest, are two Indian grey wolves. Rigid, alert, clearly in a state of alarm and agitation, they begin yelping at the tiger. The tiger spins around on the road and charges off into the forest after them.

This time the tiger turns round and glowers at the wolf, probably assessing the distance between them and the speed it would take to catch the wolf. The muscles of the tiger begin to twitch and off goes the wolf into the forest again. Finally, after one more of these encounters, the tiger moves some distance away and the wolf disappears into the forest for one last time. We can only assume that the aggressive and bold behaviour of the wolf meant he was protecting some cubs and wanted to be sure the tiger was driven out of his territory.

The tiger, now left in peace, continues his stroll.

Choose the correct statement with reference to the passage.

- (1) The narrator is on a hunting trip.
- (2) The narrator is walking along with others in the forest.
- (3) The narrator is out on a safari.
- (4) The narrator is scared of the wolves.

Options :

54025056249. 1

54025056250. 2

54025056251. 3

54025056252. 4

Question Number : 14 Question Id : 54025014064 Question Type : MCQ Option Shuffling : No Is Question Mandatory : No Calculator : None Response Time : N.A Think Time : N.A Minimum Instruction Time : 0

Correct Marks : 5 Wrong Marks : 1

Question Key Details :

Key	Value
Comprehension	Comp3

Read the following passage given below and answer the question.

Off to the right we hear the distinct 'bleep-bleep' - the alarm call of the chital, or spotted deer, announcing the presence of a predator. Kuttapan and Gautam go off to investigate and we begin to drive around to intercept them on the other side of the forest. Not ten metres down the road, we hear a loud 'varoom' - the call of the tiger - and we slide to a halt on the dusty road. Walking directly towards us at a distance of 100 metres is a large male tiger. It is one of the three-year-old males known to share this territory with his brother.

The tiger continued his casual stroll directly towards us.

When the tiger is about 50 metres past us, our reverie is broken by a commotion in the forest across the road. Anil, our guide, whispers loudly, 'Wolves!' There, propped up like little statues in a clearing in the forest, are two Indian grey wolves. Rigid, alert, clearly in a state of alarm and agitation, they begin yelping at the tiger. The tiger spins around on the road and charges off into the forest after them.

This time the tiger turns round and glowers at the wolf, probably assessing the distance between them and the speed it would take to catch the wolf. The muscles of the tiger begin to twitch and off goes the wolf into the forest again. Finally, after one more of these encounters, the tiger moves some distance away and the wolf disappears into the forest for one last time. We can only assume that the aggressive and bold behaviour of the wolf meant he was protecting some cubs and wanted to be sure the tiger was driven out of his territory.

The tiger, now left in peace, continues his stroll.

The whispering of the guide indicates the presence of _____.

- (1) tigers
- (2) wolves
- (3) hunters
- (4) cubs

Options :

- 54025056253. 1
- 54025056254. 2
- 54025056255. 3
- 54025056256. 4

Question Number : 15 Question Id : 54025014065 Question Type : MCQ Option Shuffling : No Is Question Mandatory : No Calculator : None Response Time : N.A Think Time : N.A Minimum Instruction Time : 0

Correct Marks : 5 Wrong Marks : 1

Question Key Details :

Key	Value
Comprehension	Comp3

Read the following passage given below and answer the question.

Off to the right we hear the distinct 'bleep-bleep' - the alarm call of the chital, or spotted deer, announcing the presence of a predator. Kuttapan and Gautam go off to investigate and we begin to drive around to intercept them on the other side of the forest. Not ten metres down the road, we hear a loud 'varoom' - the call of the tiger - and we slide to a halt on the dusty road. Walking directly towards us at a distance of 100 metres is a large male tiger. It is one of the three-year-old males known to share this territory with his brother.

The tiger continued his casual stroll directly towards us.

When the tiger is about 50 metres past us, our reverie is broken by a commotion in the forest across the road. Anil, our guide, whispers loudly, 'Wolves!' There, propped up like little statues in a clearing in the forest, are two Indian grey wolves. Rigid, alert, clearly in a state of alarm and agitation, they begin yelping at the tiger. The tiger spins around on the road and charges off into the forest after them.

This time the tiger turns round and glowers at the wolf, probably assessing the distance between them and the speed it would take to catch the wolf. The muscles of the tiger begin to twitch and off goes the wolf into the forest again. Finally, after one more of these encounters, the tiger moves some distance away and the wolf disappears into the forest for one last time. We can only assume that the aggressive and bold behaviour of the wolf meant he was protecting some cubs and wanted to be sure the tiger was driven out of his territory.

The tiger, now left in peace, continues his stroll.

Find out a word from the above passage which means 'day-dreaming'.

- (1) stroll
- (2) predator
- (3) reverie
- (4) agitation

Options :

54025056257. 1
54025056258. 2
54025056259. 3
54025056260. 4

Sub-Section Number : 4
Sub-Section Id : 540250879
Question Shuffling Allowed : Yes
Is Section Default? : null

Question Number : 16 Question Id : 54025014066 Question Type : MCQ Option Shuffling : No Is Question Mandatory : No Calculator : None
Response Time : N.A Think Time : N.A Minimum Instruction Time : 0

Correct Marks : 5 Wrong Marks : 1

Question Key Details :

Key	Value
Comprehension	MCQ

Change the following sentence into passive voice.

I know him.

- (1) He is known to me.
- (2) He is known by me.
- (3) He is known with me.
- (4) He is known near me.

Options :

54025056261. 1
54025056262. 2
54025056263. 3
54025056264. 4

Question Number : 17 Question Id : 54025014067 Question Type : MCQ Option Shuffling : No Is Question Mandatory : No Calculator : None
Response Time : N.A Think Time : N.A Minimum Instruction Time : 0

Correct Marks : 5 Wrong Marks : 1

Question Key Details :

Key	Value
Comprehension	MCQ

Change the following sentence from active to passive voice :

Careless driving causes many accidents.

- (1) Many accidents is caused by careless driving.
- (2) Many accidents are caused by careless driving.
- (3) Many accidents causes careless driving.
- (4) Many accidents are causes by careless driving.

Options :

- 54025056265. 1
- 54025056266. 2
- 54025056267. 3
- 54025056268. 4

Question Number : 18 Question Id : 54025014068 Question Type : MCQ Option Shuffling : No Is Question Mandatory : No Calculator : None Response Time : N.A Think Time : N.A Minimum Instruction Time : 0

Correct Marks : 5 Wrong Marks : 1

Question Key Details :

Key	Value
Comprehension	MCQ

Change the following statement to direct speech :

He asked me what I wanted.

- (1) He said to me, "What I want ?"
- (2) He said to me, "What do you want ?"
- (3) He said to me, "What he wants ?"
- (4) He said to me, "What will you want ?"

Options :

- 54025056269. 1
- 54025056270. 2
- 54025056271. 3
- 54025056272. 4

Question Number : 19 Question Id : 54025014069 Question Type : MCQ Option Shuffling : No Is Question Mandatory : No Calculator : None Response Time : N.A Think Time : N.A Minimum Instruction Time : 0

Correct Marks : 5 Wrong Marks : 1

Question Key Details :

Key	Value
Comprehension	MCQ

Choose the option which best expresses the given sentence in indirect speech :

I said to Bob, "Can you complete this work by tomorrow ?"

- (1) I asked Bob whether he could complete this work by the next day ?
- (2) I asked Bob whether he could complete this work by tomorrow.
- (3) I asked Bob whether he could complete that work by the next day.
- (4) I asked Bob whether he could complete that work by the next day ?

Options :

- 54025056273. 1
- 54025056274. 2
- 54025056275. 3
- 54025056276. 4

Question Number : 20 Question Id : 54025014070 Question Type : MCQ Option Shuffling : No Is Question Mandatory : No Calculator : None Response Time : N.A Think Time : N.A Minimum Instruction Time : 0

Correct Marks : 5 Wrong Marks : 1

Question Key Details :

Key	Value
Comprehension	MCQ

Rearrange the jumbled sentences into a paragraph :

- (A) One of the oldest mythical creature is the Unicorn
- (B) and single horn growing from the centre of its forehead
- (C) The body of deer, tail of an ox, horses hooves
- (D) It has been in Chinese folklore for thousands of years
- (E) It's most familiar form is a beast with

Choose the **correct** answer from the options given below :

- (1) (A), (B), (C), (E), (D)
- (2) (A), (D), (E), (C), (B)
- (3) (A), (E), (C), (B), (D)
- (4) (A), (D), (C), (B), (E)

Options :

- 54025056277. 1
- 54025056278. 2
- 54025056279. 3
- 54025056280. 4

Question Number : 21 Question Id : 54025014071 Question Type : MCQ Option Shuffling : No Is Question Mandatory : No Calculator : None Response Time : N.A Think Time : N.A Minimum Instruction Time : 0

Correct Marks : 5 Wrong Marks : 1

Question Key Details :

Key	Value
Comprehension	MCQ

Rewrite the following in the correct order:

- (A) they think their audience most want to visit
- (B) as appealing a way as possible
- (C) are likely to choose as their setting the location
- (D) the creators of a holiday advertisement
- (E) the setting is then presented in

Choose the **correct** answer from the options given below :

- (1) (C), (A), (B), (E), (D)
- (2) (D), (C), (A), (E), (B)
- (3) (A), (B), (E), (D), (C)
- (4) (B), (E), (C), (D), (A)

Options :

- 54025056281. 1
- 54025056282. 2
- 54025056283. 3
- 54025056284. 4

Question Number : 22 Question Id : 54025014072 Question Type : MCQ Option Shuffling : No Is Question Mandatory : No Calculator : None Response Time : N.A Think Time : N.A Minimum Instruction Time : 0

Correct Marks : 5 Wrong Marks : 1

Question Key Details :

Key	Value
Comprehension	MCQ

Pick out the correct meaning of the following word : au revoir

- (1) before we met
- (2) until we meet again
- (3) never met
- (4) unrecognised

Options :

54025056285. 1
54025056286. 2
54025056287. 3
54025056288. 4

Question Number : 23 Question Id : 54025014073 Question Type : MCQ Option Shuffling : No Is Question Mandatory : No Calculator : None Response Time : N.A Think Time : N.A Minimum Instruction Time : 0 Correct Marks : 5 Wrong Marks : 1

Question Key Details :

Key	Value
Comprehension	MCQ

Match List - I with List - II.

List - I

- (A) Alter Ego
- (B) De novo
- (C) Enblock
- (D) ibid

List - II

- (I) afresh
- (II) in a group
- (III) one's other self
- (IV) in the same book

Choose the **correct** answer from the options given below :

- (1) (A)-(III), (B)-(I), (C)-(II), (D)-(IV)
- (2) (A)-(II), (B)-(III), (C)-(IV), (D)-(I)
- (3) (A)-(I), (B)-(II), (C)-(III), (D)-(IV)
- (4) (A)-(IV), (B)-(III), (C)-(I), (D)-(II)

Options :

54025056289. 1
54025056290. 2
54025056291. 3
54025056292. 4

Question Number : 24 Question Id : 54025014074 Question Type : MCQ Option Shuffling : No Is Question Mandatory : No Calculator : None Response Time : N.A Think Time : N.A Minimum Instruction Time : 0 Correct Marks : 5 Wrong Marks : 1

Question Key Details :

Key	Value
Comprehension	MCQ

Which of the following is closest in meaning to 'penitent'.

- (1) remorseful
- (2) unabashed
- (3) patient
- (4) unadulterated

Options :

54025056293. 1
54025056294. 2
54025056295. 3
54025056296. 4

Question Number : 25 Question Id : 54025014075 Question Type : MCQ Option Shuffling : No Is Question Mandatory : No Calculator : None Response Time : N.A Think Time : N.A Minimum Instruction Time : 0 Correct Marks : 5 Wrong Marks : 1

Question Key Details :

Key	Value
Comprehension	MCQ

Match List - I with List - II.

List - I

- (A) accomplish
- (B) genial
- (C) mettle
- (D) endowment

List - II

- (I) cheerful
- (II) grant
- (III) attain
- (IV) courage

Choose the **correct** answer from the options given below :

- (1) (A)-(IV), (B)-(I), (C)-(II), (D)-(III)
- (2) (A)-(III), (B)-(I), (C)-(IV), (D)-(II)
- (3) (A)-(III), (B)-(II), (C)-(IV), (D)-(I)
- (4) (A)-(II), (B)-(III), (C)-(I), (D)-(IV)

Options :

- 54025056297. 1
- 54025056298. 2
- 54025056299. 3
- 54025056300. 4

Question Number : 26 Question Id : 54025014076 Question Type : MCQ Option Shuffling : No Is Question Mandatory : No Calculator : None Response Time : N.A Think Time : N.A Minimum Instruction Time : 0

Correct Marks : 5 Wrong Marks : 1

Question Key Details :

Key	Value
Comprehension	MCQ

Choose the sentences that have the correct articles.

- (A) Mrs. Rawat's daughter is an university student.
- (B) Shyam has a one-year old daughter.
- (C) She will soon be married to an heir to the throne.
- (D) I want to travel to an European city.
- (E) They have an MP residing in their neighbourhood.

Choose the **correct** answer from the options given below :

- (1) (A), (C) and (D) Only
- (2) (B), (C), (D) and (E) Only
- (3) (B), (C) and (E) Only
- (4) (A), (B) and (C) Only

Options :

- 54025056301. 1
- 54025056302. 2
- 54025056303. 3
- 54025056304. 4

Question Number : 27 Question Id : 54025014077 Question Type : MCQ Option Shuffling : No Is Question Mandatory : No Calculator : None Response Time : N.A Think Time : N.A Minimum Instruction Time : 0

Correct Marks : 5 Wrong Marks : 1

Question Key Details :

Key	Value
Comprehension	MCQ

_____ gift was promised to Neelam for her outstanding performance.

- (1) A
- (2) The
- (3) An
- (4) Many

Options :

- 54025056305. 1

54025056306. 2
54025056307. 3
54025056308. 4

Question Number : 28 Question Id : 54025014078 Question Type : MCQ Option Shuffling : No Is Question Mandatory : No Calculator : None Response Time : N.A Think Time : N.A Minimum Instruction Time : 0

Correct Marks : 5 Wrong Marks : 1

Question Key Details :

Key	Value
Comprehension	MCQ

Choose the correct option for the transformation of the given sentence into an exclamatory sentence :

He met with an accident and died.

- (1) Oh ! He met with an accident and died.
- (2) Alas ! He met with an accident and died.
- (3) Alas ! What a terrible accident he met with.
- (4) Ohho, What a terrible accident !

Options :

54025056309. 1
54025056310. 2
54025056311. 3
54025056312. 4

Question Number : 29 Question Id : 54025014079 Question Type : MCQ Option Shuffling : No Is Question Mandatory : No Calculator : None Response Time : N.A Think Time : N.A Minimum Instruction Time : 0

Correct Marks : 5 Wrong Marks : 1

Question Key Details :

Key	Value
Comprehension	MCQ

Choose the correct option for the transformation of the given sentence into an exclamatory sentence :

She is a wonderful woman.

- (1) What a wonderful woman she is !
- (2) Oh ! She is wonderful.
- (3) Hurrah ! She is a wonderful woman.
- (4) What ! A wonderful woman she is.

Options :

54025056313. 1
54025056314. 2
54025056315. 3
54025056316. 4

Question Number : 30 Question Id : 54025014080 Question Type : MCQ Option Shuffling : No Is Question Mandatory : No Calculator : None Response Time : N.A Think Time : N.A Minimum Instruction Time : 0

Correct Marks : 5 Wrong Marks : 1

Question Key Details :

Key	Value
Comprehension	MCQ

Choose the correct option to complete the sentence :

I assure you that I will cook for you _____ we reach our home.

- (1) before
- (2) as soon as
- (3) while
- (4) on

Options :

54025056317. 1
54025056318. 2
54025056319. 3
54025056320. 4

Question Number : 31 Question Id : 54025014081 Question Type : MCQ Option Shuffling : No Is Question Mandatory : No Calculator : None
Response Time : N.A Think Time : N.A Minimum Instruction Time : 0

Correct Marks : 5 Wrong Marks : 1

Question Key Details :

Key	Value
Comprehension	MCQ

Choose the sentences with the correct use of prepositions in the following options.

- (A) A few of the glaciers are expected to vanish by 2050.
- (B) They never turned up their proposal.
- (C) It was the last report filed by the company in last month.
- (D) I am indebted for you regarding help.

Choose the **correct** answer from the options given below :

- (1) (A) and (B) Only
- (2) (A) Only
- (3) (B) and (C) Only
- (4) (B) and (D) Only

Options :

54025056321. 1

54025056322. 2

54025056323. 3

54025056324. 4

Question Number : 32 Question Id : 54025014082 Question Type : MCQ Option Shuffling : No Is Question Mandatory : No Calculator : None
Response Time : N.A Think Time : N.A Minimum Instruction Time : 0

Correct Marks : 5 Wrong Marks : 1

Question Key Details :

Key	Value
Comprehension	MCQ

Use the appropriate word from the options to fill up the blank.

“I _____ hardly take his help.”

- (1) Could
- (2) Ought
- (3) Might
- (4) Should

Options :

54025056325. 1

54025056326. 2

54025056327. 3

54025056328. 4

Question Number : 33 Question Id : 54025014083 Question Type : MCQ Option Shuffling : No Is Question Mandatory : No Calculator : None
Response Time : N.A Think Time : N.A Minimum Instruction Time : 0

Correct Marks : 5 Wrong Marks : 1

Question Key Details :

Key	Value
Comprehension	MCQ

Which of the following sentences have modal verbs ?

- (A) Rohit comes to the class regularly.
- (B) Meenal sits to sing every morning.
- (C) We must respect our parents.
- (D) Mohan will visit the doctor after work.
- (E) Maghna's visit to the institute was fruitless.

Choose the **correct** answer from the options given below :

- (1) (A) and (D) Only
- (2) (D) and (E) Only
- (3) (A) and (C) Only
- (4) (C) and (D) Only

Options :

- 54025056329. 1
- 54025056330. 2
- 54025056331. 3
- 54025056332. 4

Question Number : 34 Question Id : 54025014084 Question Type : MCQ Option Shuffling : No Is Question Mandatory : No Calculator : None Response Time : N.A Think Time : N.A Minimum Instruction Time : 0

Correct Marks : 5 Wrong Marks : 1

Question Key Details :

Key	Value
Comprehension	MCQ

Choose the correct option given below for the format of writing an informal letter :

- (A) date and salutation
- (B) sender's address
- (C) signing off
- (D) body of the letter
- (E) signature of the sender

Choose the **correct** answer from the options given below :

- (1) (B), (E), (A), (C), (D)
- (2) (B), (A), (D), (C), (E)
- (3) (A), (B), (C), (D), (E)
- (4) (D), (A), (B), (C), (E)

Options :

- 54025056333. 1
- 54025056334. 2
- 54025056335. 3
- 54025056336. 4

Question Number : 35 Question Id : 54025014085 Question Type : MCQ Option Shuffling : No Is Question Mandatory : No Calculator : None Response Time : N.A Think Time : N.A Minimum Instruction Time : 0

Correct Marks : 5 Wrong Marks : 1

Question Key Details :

Key	Value
Comprehension	MCQ

When you are writing a formal letter to a company, what information do you include :

- (1) Your address
- (2) Your date of birth
- (3) Both your address and the Company's address
- (4) None of these

Options :

- 54025056337. 1
- 54025056338. 2

54025056339. 3
54025056340. 4

Question Number : 36 Question Id : 54025014086 Question Type : MCQ Option Shuffling : No Is Question Mandatory : No Calculator : None Response Time : N.A Think Time : N.A Minimum Instruction Time : 0

Correct Marks : 5 Wrong Marks : 1

Question Key Details :

Key	Value
Comprehension	MCQ

Choose the correct version of the given sentence from the options below :

The committee told me that they have already been processed the file.

- (1) The committee told me that they has already processed the file.
- (2) The committee told me that they had already processed the file.
- (3) The committee told me that they had been processed the file.
- (4) The committee told me that they have process the file.

Options :

54025056341. 1
54025056342. 2
54025056343. 3
54025056344. 4

Question Number : 37 Question Id : 54025014087 Question Type : MCQ Option Shuffling : No Is Question Mandatory : No Calculator : None Response Time : N.A Think Time : N.A Minimum Instruction Time : 0

Correct Marks : 5 Wrong Marks : 1

Question Key Details :

Key	Value
Comprehension	MCQ

Complete the sentence by choosing the correct option :

The company wants the staff to be _____ about the contract until everything is finalized.

- (1) discrete
- (2) discreet
- (3) discrit
- (4) deceived

Options :

54025056345. 1
54025056346. 2
54025056347. 3
54025056348. 4

Question Number : 38 Question Id : 54025014088 Question Type : MCQ Option Shuffling : No Is Question Mandatory : No Calculator : None Response Time : N.A Think Time : N.A Minimum Instruction Time : 0

Correct Marks : 5 Wrong Marks : 1

Question Key Details :

Key	Value
Comprehension	MCQ

Match List - I with List - II.

List - I (Phrasal Verb)	List - II (Meaning)
(A) Bring up	(I) to win
(B) Pull off	(II) Extinguish
(C) Fall out	(III) call attention again to
(D) Blow out	(IV) Quarrel

Choose the **correct** answer from the options given below :

- (1) (A)-(III), (B)-(I), (C)-(IV), (D)-(II)
- (2) (A)-(III), (B)-(IV), (C)-(I), (D)-(II)
- (3) (A)-(IV), (B)-(I), (C)-(III), (D)-(II)
- (4) (A)-(III), (B)-(I), (C)-(II), (D)-(IV)

Options :

54025056349. 1
54025056350. 2
54025056351. 3
54025056352. 4

Question Number : 39 Question Id : 54025014089 Question Type : MCQ Option Shuffling : No Is Question Mandatory : No Calculator : None Response Time : N.A Think Time : N.A Minimum Instruction Time : 0

Correct Marks : 5 Wrong Marks : 1

Question Key Details :

Key	Value
Comprehension	MCQ

Match List - I with List - II.

List - I (Phrasal Verb)	List - II (Meaning)
(A) Pull down	(I) Be careful
(B) Close down	(II) Fall asleep
(C) Look out	(III) Demolish
(D) Doze off	(IV) Go out of business

Choose the **correct** answer from the options given below :

- (1) (A)-(I), (B)-(III), (C)-(IV), (D)-(II)
- (2) (A)-(II), (B)-(I), (C)-(III), (D)-(IV)
- (3) (A)-(IV), (B)-(III), (C)-(II), (D)-(I)
- (4) (A)-(III), (B)-(IV), (C)-(I), (D)-(II)

Options :

54025056353. 1
54025056354. 2
54025056355. 3
54025056356. 4

Question Number : 40 Question Id : 54025014090 Question Type : MCQ Option Shuffling : No Is Question Mandatory : No Calculator : None Response Time : N.A Think Time : N.A Minimum Instruction Time : 0

Correct Marks : 5 Wrong Marks : 1

Question Key Details :

Key	Value
Comprehension	MCQ

Choose the suitable Homophone from the given option for the word 'Flour'

- (1) Hour
- (2) Out
- (3) Power
- (4) Flower

Options :

54025056357. 1
54025056358. 2
54025056359. 3
54025056360. 4

Question Number : 41 Question Id : 54025014091 Question Type : MCQ Option Shuffling : No Is Question Mandatory : No Calculator : None Response Time : N.A Think Time : N.A Minimum Instruction Time : 0

Correct Marks : 5 Wrong Marks : 1

Question Key Details :

Key	Value
Comprehension	MCQ

Rearrange the following phrases to make a meaningful sentence :

- (A) Overflow of
- (B) The spontaneous
- (C) Powerful feelings
- (D) Poetry is

Choose the **correct** answer from the options given below :

- (1) (C), (A), (B), (D)
- (2) (B), (D), (C), (A)
- (3) (D), (B), (A), (C)
- (4) (A), (B), (C), (D)

Options :

54025056361. 1
54025056362. 2
54025056363. 3
54025056364. 4

Question Number : 42 Question Id : 54025014092 Question Type : MCQ Option Shuffling : No Is Question Mandatory : No Calculator : None Response Time : N.A Think Time : N.A Minimum Instruction Time : 0

Correct Marks : 5 Wrong Marks : 1

Question Key Details :

Key	Value
Comprehension	MCQ

Match List - I with List - II.

List - I

(Word)

- (A) modest
- (B) munificent
- (C) numerous
- (D) mild

List - II

(Antonyms)

- (I) frugal
- (II) scarce
- (III) arrogant
- (IV) rough

Choose the **correct** answer from the options given below :

- (1) (A)-(III), (B)-(I), (C)-(II), (D)-(IV)
- (2) (A)-(I), (B)-(II), (C)-(III), (D)-(IV)
- (3) (A)-(II), (B)-(I), (C)-(III), (D)-(IV)
- (4) (A)-(III), (B)-(II), (C)-(I), (D)-(IV)

Options :

54025056365. 1
54025056366. 2

54025056367. 3
54025056368. 4

Question Number : 43 Question Id : 54025014093 Question Type : MCQ Option Shuffling : No Is Question Mandatory : No Calculator : None Response Time : N.A Think Time : N.A Minimum Instruction Time : 0 Correct Marks : 5 Wrong Marks : 1

Question Key Details :

Key	Value
Comprehension	MCQ

Choose the option that conveys the *Opposite* of the word 'congenial' :

- (1) Condense
- (2) Agreeable
- (3) Unsympathetic
- (4) Superimpose

Options :

54025056369. 1
54025056370. 2
54025056371. 3
54025056372. 4

Question Number : 44 Question Id : 54025014094 Question Type : MCQ Option Shuffling : No Is Question Mandatory : No Calculator : None Response Time : N.A Think Time : N.A Minimum Instruction Time : 0 Correct Marks : 5 Wrong Marks : 1

Question Key Details :

Key	Value
Comprehension	MCQ

Find out the adverb from the given sentence and tick the correct option given below :

I go to church daily and rarely fail to reach office on time.

- (1) daily, rarely
- (2) daily, on time
- (3) rarely, go
- (4) rarely, fail

Options :

54025056373. 1
54025056374. 2
54025056375. 3
54025056376. 4

Question Number : 45 Question Id : 54025014095 Question Type : MCQ Option Shuffling : No Is Question Mandatory : No Calculator : None Response Time : N.A Think Time : N.A Minimum Instruction Time : 0 Correct Marks : 5 Wrong Marks : 1

Question Key Details :

Key	Value
Comprehension	MCQ

Choose the correct option to fill in the blank :

It was nothing else _____ the passion to do something great in life.

- (1) than
- (2) but
- (3) more
- (4) towards

Options :

54025056377. 1
54025056378. 2
54025056379. 3
54025056380. 4

Question Number : 46 Question Id : 54025014096 Question Type : MCQ Option Shuffling : No Is Question Mandatory : No Calculator : None Response Time : N.A Think Time : N.A Minimum Instruction Time : 0 Correct Marks : 5 Wrong Marks : 1

Question Key Details :

Key	Value
Comprehension	MCQ

Complete the following sentence by using a question tag :

I am older to you _____.

- (1) aren't you ?
- (2) aren't we ?
- (3) aren't I ?
- (4) can't I ?

Options :

54025056381. 1
54025056382. 2
54025056383. 3
54025056384. 4

Question Number : 47 Question Id : 54025014097 Question Type : MCQ Option Shuffling : No Is Question Mandatory : No Calculator : None Response Time : N.A Think Time : N.A Minimum Instruction Time : 0

Correct Marks : 5 Wrong Marks : 1

Question Key Details :

Key	Value
Comprehension	MCQ

Choose the correct option to complete the sentence :

None of the boys _____ attended the party.

- (1) had not
- (2) has
- (3) have
- (4) are

Options :

54025056385. 1
54025056386. 2
54025056387. 3
54025056388. 4

Question Number : 48 Question Id : 54025014098 Question Type : MCQ Option Shuffling : No Is Question Mandatory : No Calculator : None Response Time : N.A Think Time : N.A Minimum Instruction Time : 0

Correct Marks : 5 Wrong Marks : 1

Question Key Details :

Key	Value
Comprehension	MCQ

Match List - I with List - II.

List - I

(Idioms)

- (A) Fall flat
- (B) In hot water
- (C) Bolt from the blue
- (D) Black sheep

List - II

(Meaning of Idiom)

- (I) Unsuccessful
- (II) Strongly disapproved of
- (III) In trouble
- (IV) All of a sudden

Choose the **correct** answer from the options given below :

- (1) (A)-(I), (B)-(IV), (C)-(III), (D)-(II)
- (2) (A)-(I), (B)-(III), (C)-(II), (D)-(IV)
- (3) (A)-(I), (B)-(III), (C)-(IV), (D)-(II)
- (4) (A)-(II), (B)-(IV), (C)-(I), (D)-(III)

Options :

54025056389. 1
54025056390. 2
54025056391. 3

Question Number : 49 Question Id : 54025014099 Question Type : MCQ Option Shuffling : No Is Question Mandatory : No Calculator : None
Response Time : N.A Think Time : N.A Minimum Instruction Time : 0

Correct Marks : 5 Wrong Marks : 1

Question Key Details :

Key	Value
Comprehension	MCQ

Match List - I with List - II to complete the Idiom.

List - I	List - II
(A) To be a	(I) music
(B) A little birdie	(II) wet blanket
(C) Not to see	(III) told me
(D) To face the	(IV) eye to eye

Choose the **correct** answer from the options given below :

- (1) (A)-(IV), (B)-(III), (C)-(II), (D)-(I)
- (2) (A)-(II), (B)-(III), (C)-(IV), (D)-(I)
- (3) (A)-(I), (B)-(II), (C)-(III), (D)-(IV)
- (4) (A)-(III), (B)-(II), (C)-(I), (D)-(IV)

Options :

54025056393. 1
54025056394. 2
54025056395. 3
54025056396. 4

Question Number : 50 Question Id : 54025014100 Question Type : MCQ Option Shuffling : No Is Question Mandatory : No Calculator : None
Response Time : N.A Think Time : N.A Minimum Instruction Time : 0

Correct Marks : 5 Wrong Marks : 1

Question Key Details :

Key	Value
Comprehension	MCQ

Pick the sentences with an Adjective Clause.

- (A) I don't know whose books are kept here.
- (B) I am glad that he won the match.
- (C) I missed the flight as I was late.
- (D) I know the place where they will come.
- (E) I remember the day when we met for the first time.

Choose the **correct** answer from the options given below :

- (1) (A) and (B) Only
- (2) (B) and (C) Only
- (3) (C) and (D) Only
- (4) (D) and (E) Only

Options :

54025056397. 1
54025056398. 2
54025056399. 3
54025056400. 4

General Test

Group Number : 2
Group Id : 540250262
Group Maximum Duration : 60

Group Minimum Duration :	60
Show Attended Group? :	No
Edit Attended Group? :	No
Break time :	0
Group Marks :	250
Is this Group for Examiner? :	No
Examiner permission :	Cant View
Show Progress Bar? :	No

General Test

Section Id :	540250318
Section Number :	1
Section type :	Online
Mandatory or Optional :	Mandatory
Number of Questions :	60
Number of Questions to be attempted :	50
Section Marks :	250
Enable Mark as Answered Mark for Review and Clear Response :	Yes
Maximum Instruction Time :	0
Sub-Section Number :	1
Sub-Section Id :	540250880
Question Shuffling Allowed :	Yes
Is Section Default? :	null

Question Number : 51 Question Id : 54025014101 Question Type : MCQ Option Shuffling : No Is Question Mandatory : No Calculator : None
 Response Time : N.A Think Time : N.A Minimum Instruction Time : 0
 Correct Marks : 5 Wrong Marks : 1

Question Key Details :

Key	Value
Comprehension	MCQ

If $A : B : C = 1 : 4 : 7$ and $B = (2x)\%$ of $(A + C)$, then x is :

- (1) 12
- (2) 25
- (3) 30
- (4) 45

Options :

54025056401. 1
 54025056402. 2
 54025056403. 3
 54025056404. 4

Question Number : 51 Question Id : 54025014101 Question Type : MCQ Option Shuffling : No Is Question Mandatory : No Calculator : None
 Response Time : N.A Think Time : N.A Minimum Instruction Time : 0
 Correct Marks : 5 Wrong Marks : 1

Question Key Details :

Key	Value
Comprehension	MCQ

यदि $A : B : C = 1 : 4 : 7$ और $B = (A + C)$ का $(2x)\%$ है, तो x का मान होगा :

- (1) 12
- (2) 25
- (3) 30
- (4) 45

Options :

54025056401. 1
 54025056402. 2
 54025056403. 3
 54025056404. 4

Question Number : 52 Question Id : 54025014102 Question Type : MCQ Option Shuffling : No Is Question Mandatory : No Calculator : None
 Response Time : N.A Think Time : N.A Minimum Instruction Time : 0
 Correct Marks : 5 Wrong Marks : 1

Question Key Details :

Key	Value
Comprehension	MCQ

The cost price 15 articles is equal to the selling price of 20 articles. Find the loss percentage.

- (1) 20%
- (2) 30%
- (3) 40%
- (4) 25%

Options :

- 54025056405. 1
- 54025056406. 2
- 54025056407. 3
- 54025056408. 4

Question Number : 52 Question Id : 54025014102 Question Type : MCQ Option Shuffling : No Is Question Mandatory : No Calculator : None Response Time : N.A Think Time : N.A Minimum Instruction Time : 0

Correct Marks : 5 Wrong Marks : 1

Question Key Details :

Key	Value
Comprehension	MCQ

15 वस्तुओं का क्रय मूल्य 20 वस्तुओं के विक्रय मूल्य के बराबर है। हानि प्रतिशत ज्ञात कीजिए।

- (1) 20%
- (2) 30%
- (3) 40%
- (4) 25%

Options :

- 54025056405. 1
- 54025056406. 2
- 54025056407. 3
- 54025056408. 4

Question Number : 53 Question Id : 54025014103 Question Type : MCQ Option Shuffling : No Is Question Mandatory : No Calculator : None Response Time : N.A Think Time : N.A Minimum Instruction Time : 0

Correct Marks : 5 Wrong Marks : 1

Question Key Details :

Key	Value
Comprehension	MCQ

The marked price of a chair is 150% of its cost price. A discount of 30% is given while selling the chair. What is the profit percentage ?

- (1) 7%
- (2) 5%
- (3) 4%
- (4) 6%

Options :

- 54025056409. 1
- 54025056410. 2
- 54025056411. 3
- 54025056412. 4

Question Number : 53 Question Id : 54025014103 Question Type : MCQ Option Shuffling : No Is Question Mandatory : No Calculator : None Response Time : N.A Think Time : N.A Minimum Instruction Time : 0

Correct Marks : 5 Wrong Marks : 1

Question Key Details :

Key	Value
Comprehension	MCQ

एक कुर्सी का अंकित मूल्य, उसके क्रय मूल्य से 150% अधिक है। बेचते समय 30% की छूट दी जाती है। लाभ प्रतिशत क्या है?

- (1) 7%
- (2) 5%
- (3) 4%
- (4) 6%

Options :

- 54025056409. 1
- 54025056410. 2
- 54025056411. 3
- 54025056412. 4

Question Number : 54 Question Id : 54025014104 Question Type : MCQ Option Shuffling : No Is Question Mandatory : No Calculator : None Response Time : N.A Think Time : N.A Minimum Instruction Time : 0

Correct Marks : 5 Wrong Marks : 1

Question Key Details :

Key	Value
Comprehension	MCQ

Two years ago, population of a city was 16,52,600 which increased by 10% in the first year and by 15% in the second year. Find the present population of the city.

- (1) 20,83,708
- (2) 19,08,753
- (3) 18,60,539
- (4) 20,90,539

Options :

- 54025056413. 1
- 54025056414. 2
- 54025056415. 3
- 54025056416. 4

Question Number : 54 Question Id : 54025014104 Question Type : MCQ Option Shuffling : No Is Question Mandatory : No Calculator : None Response Time : N.A Think Time : N.A Minimum Instruction Time : 0

Correct Marks : 5 Wrong Marks : 1

Question Key Details :

Key	Value
Comprehension	MCQ

दो वर्ष पहले, एक शहर की जनसंख्या 16,52,600 थी जो प्रथम वर्ष में 10% बढ़ गई, एवं द्वितीय वर्ष में 15% बढ़ी, शहर की वर्तमान जनसंख्या ज्ञात कीजिए :

- (1) 20,83,708
- (2) 19,08,753
- (3) 18,60,539
- (4) 20,90,539

Options :

- 54025056413. 1
- 54025056414. 2
- 54025056415. 3
- 54025056416. 4

Question Number : 55 Question Id : 54025014105 Question Type : MCQ Option Shuffling : No Is Question Mandatory : No Calculator : None Response Time : N.A Think Time : N.A Minimum Instruction Time : 0

Correct Marks : 5 Wrong Marks : 1

Question Key Details :

Key	Value
Comprehension	MCQ

A sum of ₹ 10,000 becomes ₹ 14,400 on compound interest in 2 years. What is the rate of interest per annum ?

- (1) 10%
- (2) 40%
- (3) 20%
- (4) 15%

Options :

- 54025056417. 1
- 54025056418. 2
- 54025056419. 3
- 54025056420. 4

Question Number : 55 Question Id : 54025014105 Question Type : MCQ Option Shuffling : No Is Question Mandatory : No Calculator : None Response Time : N.A Think Time : N.A Minimum Instruction Time : 0

Correct Marks : 5 Wrong Marks : 1

Question Key Details :

Key	Value
Comprehension	MCQ

10,000 रुपये की राशि, चक्रवृद्धि ब्याज पर 2 वर्ष में ₹ 14,400 हो जाती है। ब्याज की वार्षिक दर क्या है ?

- (1) 10%
- (2) 40%
- (3) 20%
- (4) 15%

Options :

- 54025056417. 1
- 54025056418. 2
- 54025056419. 3
- 54025056420. 4

Question Number : 56 Question Id : 54025014106 Question Type : MCQ Option Shuffling : No Is Question Mandatory : No Calculator : None Response Time : N.A Think Time : N.A Minimum Instruction Time : 0

Correct Marks : 5 Wrong Marks : 1

Question Key Details :

Key	Value
Comprehension	MCQ

The area of a circle is 154 cm^2 . Find the circumference of the circle. $\left(\text{Take } \pi = \frac{22}{7} \right)$

- (1) 22 cm
- (2) 28 cm
- (3) 44 cm
- (4) 56 cm

Options :

- 54025056421. 1
- 54025056422. 2
- 54025056423. 3
- 54025056424. 4

Question Number : 56 Question Id : 54025014106 Question Type : MCQ Option Shuffling : No Is Question Mandatory : No Calculator : None Response Time : N.A Think Time : N.A Minimum Instruction Time : 0

Correct Marks : 5 Wrong Marks : 1

Question Key Details :

Key	Value
Comprehension	MCQ

एक वृत्त का क्षेत्रफल 154 cm^2 है, वृत्त की परिधि ज्ञात कीजिए। $\left(\pi = \frac{22}{7}\right)$

- (1) 22 cm
- (2) 28 cm
- (3) 44 cm
- (4) 56 cm

Options :

- 54025056421. 1
- 54025056422. 2
- 54025056423. 3
- 54025056424. 4

Question Number : 57 Question Id : 54025014107 Question Type : MCQ Option Shuffling : No Is Question Mandatory : No Calculator : None Response Time : N.A Think Time : N.A Minimum Instruction Time : 0

Correct Marks : 5 Wrong Marks : 1

Question Key Details :

Key	Value
Comprehension	MCQ

If perimeter of a rhombus is 104 cm and length of one of its diagonals is 48 cm, then area of the rhombus (in cm^2) is :

- (1) 960
- (2) 240
- (3) 480
- (4) 1344

Options :

- 54025056425. 1
- 54025056426. 2
- 54025056427. 3
- 54025056428. 4

Question Number : 57 Question Id : 54025014107 Question Type : MCQ Option Shuffling : No Is Question Mandatory : No Calculator : None Response Time : N.A Think Time : N.A Minimum Instruction Time : 0

Correct Marks : 5 Wrong Marks : 1

Question Key Details :

Key	Value
Comprehension	MCQ

एक समचतुर्भुज का परिमाण 104 सें.मी. है, और इसके एक विकर्ण की लंबाई 48 सें.मी. है। समचतुर्भुज का क्षेत्रफल (cm^2 में) ज्ञात कीजिए :

- (1) 960
- (2) 240
- (3) 480
- (4) 1344

Options :

- 54025056425. 1
- 54025056426. 2
- 54025056427. 3
- 54025056428. 4

Question Number : 58 Question Id : 54025014108 Question Type : MCQ Option Shuffling : No Is Question Mandatory : No Calculator : None Response Time : N.A Think Time : N.A Minimum Instruction Time : 0

Correct Marks : 5 Wrong Marks : 1

Question Key Details :

Key	Value
Comprehension	MCQ

If point B(0, 1) is equidistant from points A(5, -3) and C(x, 6), then find the values of x.

- (1) ± 2
- (2) ± 8
- (3) ± 4
- (4) ± 5

Options :

- 54025056429. 1
- 54025056430. 2
- 54025056431. 3
- 54025056432. 4

Question Number : 58 Question Id : 54025014108 Question Type : MCQ Option Shuffling : No Is Question Mandatory : No Calculator : None Response Time : N.A Think Time : N.A Minimum Instruction Time : 0

Correct Marks : 5 Wrong Marks : 1

Question Key Details :

Key	Value
Comprehension	MCQ

यदि बिन्दु B(0, 1) बिन्दुओं A(5, -3) और C (x, 6) से समदूरस्थ है, तो x का मान ज्ञात कीजिए।

- (1) ± 2
- (2) ± 8
- (3) ± 4
- (4) ± 5

Options :

- 54025056429. 1
- 54025056430. 2
- 54025056431. 3
- 54025056432. 4

Question Number : 59 Question Id : 54025014109 Question Type : MCQ Option Shuffling : No Is Question Mandatory : No Calculator : None Response Time : N.A Think Time : N.A Minimum Instruction Time : 0

Correct Marks : 5 Wrong Marks : 1

Question Key Details :

Key	Value
Comprehension	MCQ

Find the median of the following data :

42, 19, 46, 17, 8, 35, 26, 39, 29

- (1) 8
- (2) 46
- (3) 29
- (4) 35

Options :

- 54025056433. 1
- 54025056434. 2
- 54025056435. 3
- 54025056436. 4

Question Number : 59 Question Id : 54025014109 Question Type : MCQ Option Shuffling : No Is Question Mandatory : No Calculator : None Response Time : N.A Think Time : N.A Minimum Instruction Time : 0

Correct Marks : 5 Wrong Marks : 1

Question Key Details :

Key	Value
Comprehension	MCQ

निम्नलिखित आँकड़ों की माध्यिका ज्ञात कीजिए :

42, 19, 46, 17, 8, 35, 26, 39, 29

- (1) 8
(2) 46
(3) 29
(4) 35

Options :

54025056433. 1
54025056434. 2
54025056435. 3
54025056436. 4

Question Number : 60 Question Id : 54025014110 Question Type : MCQ Option Shuffling : No Is Question Mandatory : No Calculator : None Response Time : N.A Think Time : N.A Minimum Instruction Time : 0

Correct Marks : 5 Wrong Marks : 1

Question Key Details :

Key	Value
Comprehension	MCQ

Three coins are tossed once. Probability of getting no head is :

- (1) $\frac{1}{8}$
(2) $\frac{1}{4}$
(3) $\frac{3}{8}$
(4) $\frac{1}{2}$

Options :

54025056437. 1
54025056438. 2
54025056439. 3
54025056440. 4

Question Number : 60 Question Id : 54025014110 Question Type : MCQ Option Shuffling : No Is Question Mandatory : No Calculator : None Response Time : N.A Think Time : N.A Minimum Instruction Time : 0

Correct Marks : 5 Wrong Marks : 1

Question Key Details :

Key	Value
Comprehension	MCQ

तीन सिक्के, एक साथ उछाले जाते हैं। एक भी चित (head) न आने की प्रायिकता है :

- (1) $\frac{1}{8}$
(2) $\frac{1}{4}$
(3) $\frac{3}{8}$
(4) $\frac{1}{2}$

Options :

54025056437. 1
54025056438. 2
54025056439. 3
54025056440. 4

Question Number : 61 Question Id : 54025014111 Question Type : MCQ Option Shuffling : No Is Question Mandatory : No Calculator : None
Response Time : N.A Think Time : N.A Minimum Instruction Time : 0

Correct Marks : 5 Wrong Marks : 1

Question Key Details :

Key	Value
Comprehension	MCQ

Find the average of squares of first five natural numbers.

- (1) 8
- (2) 10
- (3) 11
- (4) 5

Options :

54025056441. 1
54025056442. 2
54025056443. 3
54025056444. 4

Question Number : 61 Question Id : 54025014111 Question Type : MCQ Option Shuffling : No Is Question Mandatory : No Calculator : None
Response Time : N.A Think Time : N.A Minimum Instruction Time : 0

Correct Marks : 5 Wrong Marks : 1

Question Key Details :

Key	Value
Comprehension	MCQ

प्रथम पाँच प्राकृतिक संख्याओं के वर्गों का माध्य ज्ञात कीजिए।

- (1) 8
- (2) 10
- (3) 11
- (4) 5

Options :

54025056441. 1
54025056442. 2
54025056443. 3
54025056444. 4

Question Number : 62 Question Id : 54025014112 Question Type : MCQ Option Shuffling : No Is Question Mandatory : No Calculator : None
Response Time : N.A Think Time : N.A Minimum Instruction Time : 0

Correct Marks : 5 Wrong Marks : 1

Question Key Details :

Key	Value
Comprehension	MCQ

Two bags of iron ore weight 180 kg 250 gm and 270 kg 50 gm respectively. How much iron ore (in gm) must be taken out from the first bag and added to the second bag so that weight of the first bag may then be two-third of the second bag ?

- (1) 0.13
- (2) 13
- (3) 130
- (4) 500

Options :

54025056445. 1
54025056446. 2
54025056447. 3
54025056448. 4

Question Number : 62 Question Id : 54025014112 Question Type : MCQ Option Shuffling : No Is Question Mandatory : No Calculator : None
Response Time : N.A Think Time : N.A Minimum Instruction Time : 0

Correct Marks : 5 Wrong Marks : 1

Question Key Details :

Key	Value
Comprehension	MCQ

कच्चे लोहे से भरे दो थैलों का वजन क्रमशः 180 कि.ग्रा., 250 ग्राम एवं 270 कि.ग्रा. 50 ग्राम है। पहले थैले में से कितना कच्चा लोहा (ग्राम में) निकालकर दूसरे थैले में डाला जाए कि पहले थैले का वजन, दूसरे थैले के वजन का दो-तिहाई हो जाए।

- (1) 0.13
(2) 13
(3) 130
(4) 500

Options :

54025056445. 1
54025056446. 2
54025056447. 3
54025056448. 4

Question Number : 63 Question Id : 54025014113 Question Type : MCQ Option Shuffling : No Is Question Mandatory : No Calculator : None Response Time : N.A Think Time : N.A Minimum Instruction Time : 0

Correct Marks : 5 Wrong Marks : 1

Question Key Details :

Key	Value
Comprehension	MCQ

In a ΔABC right angled at A, if $\angle ABC = 60^\circ$ and $AC = 4$ units, then length of BC (in units) is :

- (1) $\sqrt{3}$
(2) $\frac{8}{\sqrt{3}}$
(3) 8
(4) $\frac{4}{\sqrt{3}}$

Options :

54025056449. 1
54025056450. 2
54025056451. 3
54025056452. 4

Question Number : 63 Question Id : 54025014113 Question Type : MCQ Option Shuffling : No Is Question Mandatory : No Calculator : None Response Time : N.A Think Time : N.A Minimum Instruction Time : 0

Correct Marks : 5 Wrong Marks : 1

Question Key Details :

Key	Value
Comprehension	MCQ

ΔABC में, $\angle A$ समकोण है। यदि $\angle ABC = 60^\circ$ और $AC = 4$ इकाई है, तब BC की लम्बाई (इकाई में) होगी :

- (1) $\sqrt{3}$
(2) $\frac{8}{\sqrt{3}}$
(3) 8
(4) $\frac{4}{\sqrt{3}}$

Options :

54025056449. 1
54025056450. 2
54025056451. 3
54025056452. 4

Question Number : 64 Question Id : 54025014114 Question Type : MCQ Option Shuffling : No Is Question Mandatory : No Calculator : None Response Time : N.A Think Time : N.A Minimum Instruction Time : 0

Correct Marks : 5 Wrong Marks : 1

Question Key Details :

Key	Value
-----	-------

Comprehension	MCQ
---------------	-----

The heights of two right circular cones are in the ratio 1 : 2 and the circumferences of their bases are in the ratio 3 : 4. Find the ratio of their volumes.

- (1) 32 : 9
 (2) 9 : 32
 (3) 7 : 23
 (4) 23 : 7

Options :

54025056453. 1
 54025056454. 2
 54025056455. 3
 54025056456. 4

Question Number : 64 Question Id : 54025014114 Question Type : MCQ Option Shuffling : No Is Question Mandatory : No Calculator : None Response Time : N.A Think Time : N.A Minimum Instruction Time : 0

Correct Marks : 5 Wrong Marks : 1

Question Key Details :

Key	Value
Comprehension	MCQ

दो लंब वृत्तीय शंकुओं की ऊँचाई का अनुपात 1 : 2 और उनके आधार की परिधियों का अनुपात 3 : 4 है। उनके आयतनों का अनुपात ज्ञात कीजिए।

- (1) 32 : 9
 (2) 9 : 32
 (3) 7 : 23
 (4) 23 : 7

Options :

54025056453. 1
 54025056454. 2
 54025056455. 3
 54025056456. 4

Question Number : 65 Question Id : 54025014115 Question Type : MCQ Option Shuffling : No Is Question Mandatory : No Calculator : None Response Time : N.A Think Time : N.A Minimum Instruction Time : 0

Correct Marks : 5 Wrong Marks : 1

Question Key Details :

Key	Value
Comprehension	MCQ

A, B and C can do a work in 10, 12 and 15 days respectively. In how many days will the work be completed if B is assisted by both A and C on every third day ?

- (1) $7\frac{1}{5}$
 (2) $7\frac{2}{3}$
 (3) 8
 (4) 9

Options :

54025056457. 1
 54025056458. 2
 54025056459. 3
 54025056460. 4

Question Number : 65 Question Id : 54025014115 Question Type : MCQ Option Shuffling : No Is Question Mandatory : No Calculator : None Response Time : N.A Think Time : N.A Minimum Instruction Time : 0

Correct Marks : 5 Wrong Marks : 1

Question Key Details :

Key	Value
Comprehension	MCQ

A, B और C एक कार्य को क्रमशः 10, 12 और 15 दिनों में कर सकते हैं। यदि प्रत्येक तीसरे दिन A और C, B के साथ कार्य करते हों, तो इस कार्य को पूरा होने में कितने दिन लगेंगे ?

(1) $7\frac{1}{5}$

(2) $7\frac{2}{3}$

(3) 8

(4) 9

Options :

54025056457. 1

54025056458. 2

54025056459. 3

54025056460. 4

Question Number : 66 Question Id : 54025014116 Question Type : MCQ Option Shuffling : No Is Question Mandatory : No Calculator : None

Response Time : N.A Think Time : N.A Minimum Instruction Time : 0

Correct Marks : 5 Wrong Marks : 1

Question Key Details :

Key	Value
Comprehension	MCQ

Which of the following speeds is maximum ?

(1) 7.3 m/s

(2) 28.4 km/h

(3) 6.5 m/min

(4) 0.0073 km/s

Options :

54025056461. 1

54025056462. 2

54025056463. 3

54025056464. 4

Question Number : 66 Question Id : 54025014116 Question Type : MCQ Option Shuffling : No Is Question Mandatory : No Calculator : None

Response Time : N.A Think Time : N.A Minimum Instruction Time : 0

Correct Marks : 5 Wrong Marks : 1

Question Key Details :

Key	Value
Comprehension	MCQ

निम्नलिखित में से कौन-सी गति अधिकतम है ?

(1) 7.3 मी./से.

(2) 28.4 किमी./घ.

(3) 6.5 मी./मिनट

(4) 0.0073 किमी./से.

Options :

54025056461. 1

54025056462. 2

54025056463. 3

54025056464. 4

Question Number : 67 Question Id : 54025014117 Question Type : MCQ Option Shuffling : No Is Question Mandatory : No Calculator : None

Response Time : N.A Think Time : N.A Minimum Instruction Time : 0

Correct Marks : 5 Wrong Marks : 1

Question Key Details :

Key	Value
Comprehension	MCQ

A thief is spotted by a policeman from a distance of 200 meters. The policeman starts chasing at a speed of 10 km/h while the thief is running at a speed of 8 km/h. After how much time (in minutes) will the thief be caught ?

- (1) 3
- (2) 5
- (3) 6
- (4) 8

Options :

- 54025056465. 1
- 54025056466. 2
- 54025056467. 3
- 54025056468. 4

Question Number : 67 Question Id : 54025014117 Question Type : MCQ Option Shuffling : No Is Question Mandatory : No Calculator : None Response Time : N.A Think Time : N.A Minimum Instruction Time : 0

Correct Marks : 5 Wrong Marks : 1

Question Key Details :

Key	Value
Comprehension	MCQ

एक पुलिसकर्मी ने, एक चोर को 200 m की दूरी से देखा। पुलिसकर्मी 10 km/h की गति से चोर का पीछा करता है, जबकि चोर 8 km/h की गति से दौड़ रहा है। कितने समय (मिनटों में) चोर पकड़ा जाएगा ?

- (1) 3
- (2) 5
- (3) 6
- (4) 8

Options :

- 54025056465. 1
- 54025056466. 2
- 54025056467. 3
- 54025056468. 4

Question Number : 68 Question Id : 54025014118 Question Type : MCQ Option Shuffling : No Is Question Mandatory : No Calculator : None Response Time : N.A Think Time : N.A Minimum Instruction Time : 0

Correct Marks : 5 Wrong Marks : 1

Question Key Details :

Key	Value
Comprehension	MCQ

If 7-digit number 485A64B is divisible by 8 and 9, then find the greatest value of A + B.

- (1) 18
- (2) 6
- (3) 9
- (4) 12

Options :

- 54025056469. 1
- 54025056470. 2
- 54025056471. 3
- 54025056472. 4

Question Number : 68 Question Id : 54025014118 Question Type : MCQ Option Shuffling : No Is Question Mandatory : No Calculator : None Response Time : N.A Think Time : N.A Minimum Instruction Time : 0

Correct Marks : 5 Wrong Marks : 1

Question Key Details :

Key	Value
Comprehension	MCQ

यदि 7-अंकीय संख्या 485A64B, 8 और 9 से विभाज्य है, तो A + B का अधिकतम मान ज्ञात कीजिए ?

- (1) 18
- (2) 6
- (3) 9
- (4) 12

Options :

- 54025056469. 1
- 54025056470. 2
- 54025056471. 3
- 54025056472. 4

Question Number : 69 Question Id : 54025014119 Question Type : MCQ Option Shuffling : No Is Question Mandatory : No Calculator : None Response Time : N.A Think Time : N.A Minimum Instruction Time : 0

Correct Marks : 5 Wrong Marks : 1

Question Key Details :

Key	Value
Comprehension	MCQ

A ladder 25 feet long is leaning against a wall such that it touches 24 feet high window. How far is the foot of the ladder from the wall ?

- (1) 24.5 feet
- (2) 12 feet
- (3) 9 feet
- (4) 7 feet

Options :

- 54025056473. 1
- 54025056474. 2
- 54025056475. 3
- 54025056476. 4

Question Number : 69 Question Id : 54025014119 Question Type : MCQ Option Shuffling : No Is Question Mandatory : No Calculator : None Response Time : N.A Think Time : N.A Minimum Instruction Time : 0

Correct Marks : 5 Wrong Marks : 1

Question Key Details :

Key	Value
Comprehension	MCQ

25 फीट लंबी एक सीढ़ी दीवार से इस प्रकार टिकी है कि 24 फीट ऊँची खिड़की को छूती है। तब सीढ़ी का निचला सिरा दीवार से कितनी दूरी पर है ?

- (1) 24.5 फीट
- (2) 12 फीट
- (3) 9 फीट
- (4) 7 फीट

Options :

- 54025056473. 1
- 54025056474. 2
- 54025056475. 3
- 54025056476. 4

Question Number : 70 Question Id : 54025014120 Question Type : MCQ Option Shuffling : No Is Question Mandatory : No Calculator : None Response Time : N.A Think Time : N.A Minimum Instruction Time : 0

Correct Marks : 5 Wrong Marks : 1

Question Key Details :

Key	Value
Comprehension	MCQ

In an A.P., the product of the first term and the second term is 120 and the product of the second term and the third term is 168. Find the tenth term of the A.P. when common difference $d > 0$.

- (1) 132
- (2) 71
- (3) 28
- (4) 30

Options :

- 54025056477. 1
- 54025056478. 2
- 54025056479. 3
- 54025056480. 4

Question Number : 70 Question Id : 54025014120 Question Type : MCQ Option Shuffling : No Is Question Mandatory : No Calculator : None Response Time : N.A Think Time : N.A Minimum Instruction Time : 0

Correct Marks : 5 Wrong Marks : 1

Question Key Details :

Key	Value
Comprehension	MCQ

एक समान्तर श्रेणी में, पहले पद और दूसरे पद का गुणनफल 120 है और उसके दूसरे पद और तीसरे पद का गुणनफल 168 है। यदि सर्वांतर ($d > 0$) है, तो समान्तर श्रेणी का 10वां पद ज्ञात कीजिए।

- (1) 132
- (2) 71
- (3) 28
- (4) 30

Options :

- 54025056477. 1
- 54025056478. 2
- 54025056479. 3
- 54025056480. 4

Question Number : 71 Question Id : 54025014121 Question Type : MCQ Option Shuffling : No Is Question Mandatory : No Calculator : None Response Time : N.A Think Time : N.A Minimum Instruction Time : 0

Correct Marks : 5 Wrong Marks : 1

Question Key Details :

Key	Value
Comprehension	MCQ

Chairman of First Finance Commission was _____.

- (1) Mahavir Tyagi
- (2) A.K. Chandra
- (3) K.C. Neogi
- (4) K.C. Pant

Options :

- 54025056481. 1
- 54025056482. 2
- 54025056483. 3
- 54025056484. 4

Question Number : 71 Question Id : 54025014121 Question Type : MCQ Option Shuffling : No Is Question Mandatory : No Calculator : None Response Time : N.A Think Time : N.A Minimum Instruction Time : 0

Correct Marks : 5 Wrong Marks : 1

Question Key Details :

Key	Value
Comprehension	MCQ

वित्त आयोग के प्रथम अध्यक्ष निम्न में से कौन थे ?

- (1) महावीर त्यागी
- (2) ए.के. चन्द्र
- (3) के.सी. नियोगी
- (4) के.सी. पन्त

Options :

54025056481. 1
54025056482. 2
54025056483. 3
54025056484. 4

Question Number : 72 Question Id : 54025014122 Question Type : MCQ Option Shuffling : No Is Question Mandatory : No Calculator : None Response Time : N.A Think Time : N.A Minimum Instruction Time : 0

Correct Marks : 5 Wrong Marks : 1

Question Key Details :

Key	Value
Comprehension	MCQ

Which one of the following is Greenhouse Gas ?

- (1) Oxygen
- (2) Hydrogen
- (3) Methane
- (4) Nitrogen

Options :

54025056485. 1
54025056486. 2
54025056487. 3
54025056488. 4

Question Number : 72 Question Id : 54025014122 Question Type : MCQ Option Shuffling : No Is Question Mandatory : No Calculator : None Response Time : N.A Think Time : N.A Minimum Instruction Time : 0

Correct Marks : 5 Wrong Marks : 1

Question Key Details :

Key	Value
Comprehension	MCQ

निम्नलिखित में से कौन-सी ग्रीन-हाउस गैस है ?

- (1) ऑक्सीजन
- (2) हाइड्रोजन
- (3) मिथेन
- (4) नाइट्रोजन

Options :

54025056485. 1
54025056486. 2
54025056487. 3
54025056488. 4

Question Number : 73 Question Id : 54025014123 Question Type : MCQ Option Shuffling : No Is Question Mandatory : No Calculator : None Response Time : N.A Think Time : N.A Minimum Instruction Time : 0

Correct Marks : 5 Wrong Marks : 1

Question Key Details :

Key	Value
Comprehension	MCQ

Lucknow city is situated on which Bank of River ?

- (1) Ganga
- (2) Gomati
- (3) Tapti
- (4) Sutlej

Options :

54025056489. 1
54025056490. 2
54025056491. 3
54025056492. 4

Question Number : 73 Question Id : 54025014123 Question Type : MCQ Option Shuffling : No Is Question Mandatory : No Calculator : None
Response Time : N.A Think Time : N.A Minimum Instruction Time : 0

Correct Marks : 5 Wrong Marks : 1

Question Key Details :

Key	Value
Comprehension	MCQ

लखनऊ शहर, किस नदी के किनारे स्थित है ?

- (1) गंगा
- (2) गोमती
- (3) ताप्ती
- (4) सतलज

Options :

54025056489. 1
54025056490. 2
54025056491. 3
54025056492. 4

Question Number : 74 Question Id : 54025014124 Question Type : MCQ Option Shuffling : No Is Question Mandatory : No Calculator : None
Response Time : N.A Think Time : N.A Minimum Instruction Time : 0

Correct Marks : 5 Wrong Marks : 1

Question Key Details :

Key	Value
Comprehension	MCQ

Quit India Movement Started in _____.

- (1) 1944
- (2) 1942
- (3) 1940
- (4) 1946

Options :

54025056493. 1
54025056494. 2
54025056495. 3
54025056496. 4

Question Number : 74 Question Id : 54025014124 Question Type : MCQ Option Shuffling : No Is Question Mandatory : No Calculator : None
Response Time : N.A Think Time : N.A Minimum Instruction Time : 0

Correct Marks : 5 Wrong Marks : 1

Question Key Details :

Key	Value
Comprehension	MCQ

भारत छोड़ो आन्दोलन किस वर्ष प्रारम्भ हुआ था ?

- (1) 1944
- (2) 1942
- (3) 1940
- (4) 1946

Options :

54025056493. 1
54025056494. 2
54025056495. 3
54025056496. 4

Question Number : 75 Question Id : 54025014125 Question Type : MCQ Option Shuffling : No Is Question Mandatory : No Calculator : None Response Time : N.A Think Time : N.A Minimum Instruction Time : 0

Correct Marks : 5 Wrong Marks : 1

Question Key Details :

Key	Value
Comprehension	MCQ

The original name of Swami Vivekananda was _____.

- (1) Narendranath Dutt
- (2) Aloknath Dutt
- (3) Ajay Dutt
- (4) Virendranath Dutt

Options :

54025056497. 1
54025056498. 2
54025056499. 3
54025056500. 4

Question Number : 75 Question Id : 54025014125 Question Type : MCQ Option Shuffling : No Is Question Mandatory : No Calculator : None Response Time : N.A Think Time : N.A Minimum Instruction Time : 0

Correct Marks : 5 Wrong Marks : 1

Question Key Details :

Key	Value
Comprehension	MCQ

स्वामी विवेकानन्द का मूल नाम क्या था ?

- (1) नरेन्द्र नाथ दत्त
- (2) अलोक नाथ दत्त
- (3) अजय दत्त
- (4) वीरेन्द्र नाथ दत्त

Options :

54025056497. 1
54025056498. 2
54025056499. 3
54025056500. 4

Question Number : 76 Question Id : 54025014126 Question Type : MCQ Option Shuffling : No Is Question Mandatory : No Calculator : None Response Time : N.A Think Time : N.A Minimum Instruction Time : 0

Correct Marks : 5 Wrong Marks : 1

Question Key Details :

Key	Value
Comprehension	MCQ

Champaran movement was meant for _____.

- (1) Solving Problems of Indian Farmers
- (2) Protest against the Government's Education Policy
- (3) To remove defects of the Civil Services
- (4) Separate Elections of Muslims

Options :

54025056501. 1
54025056502. 2
54025056503. 3
54025056504. 4

Question Number : 76 Question Id : 54025014126 Question Type : MCQ Option Shuffling : No Is Question Mandatory : No Calculator : None Response Time : N.A Think Time : N.A Minimum Instruction Time : 0

Correct Marks : 5 Wrong Marks : 1

Question Key Details :

Key	Value
Comprehension	MCQ

चम्पारण आन्दोलन निम्न में किससे संबंधित है ?

- (1) भारतीय किसानों की समस्याओं को सुलझाने के लिए
- (2) सरकारी की शिक्षा नीति के खिलाफ विद्रोह
- (3) प्रशासनिक सेवाओं की त्रुटियों को दूर करने के लिए
- (4) मुसलमानों के पृथक चुनाव के लिए

Options :

54025056501. 1
54025056502. 2
54025056503. 3
54025056504. 4

Question Number : 77 Question Id : 54025014127 Question Type : MCQ Option Shuffling : No Is Question Mandatory : No Calculator : None Response Time : N.A Think Time : N.A Minimum Instruction Time : 0

Correct Marks : 5 Wrong Marks : 1

Question Key Details :

Key	Value
Comprehension	MCQ

Match List - I with List - II.

List - I**(Instruments)**

- (A) Guitar
- (B) Flute
- (C) Shehnai
- (D) Violin

List - II**(Artists)**

- (I) Dr. Smt. N. Rajan
- (II) BishMillah Khan
- (III) Hari Prasad Chaurasia
- (IV) Brij Bhushan Kabra

Choose the **most appropriate** answer from the options given below :

- (1) (A)-(I), (B)-(II), (C)-(III), (D)-(IV)
- (2) (A)-(IV), (B)-(III), (C)-(II), (D)-(I)
- (3) (A)-(I), (B)-(III), (C)-(IV), (D)-(II)
- (4) (A)-(IV), (B)-(III), (C)-(I), (D)-(II)

Options :

54025056505. 1
54025056506. 2
54025056507. 3
54025056508. 4

Question Number : 77 Question Id : 54025014127 Question Type : MCQ Option Shuffling : No Is Question Mandatory : No Calculator : None Response Time : N.A Think Time : N.A Minimum Instruction Time : 0

Correct Marks : 5 Wrong Marks : 1

Question Key Details :

Key	Value
Comprehension	MCQ

सूची-I से सूची-II का मिलान कीजिए:

सूची-I

(वाद्य यंत्र)

(A) गिटार

(B) बांसुरी

(C) शहनाई

(D) वायलिन

सूची-II

(कलाकार)

(I) डॉ. श्रीमती एन. राजन

(II) बिस्मिल्ला खाँ

(III) हरि प्रसाद चौरसिया

(IV) ब्रज भूषण काबरा

नीचे दिए गए विकल्पों में से सबसे उचित उत्तर का चयन कीजिए :

(1) (A)-(I), (B)-(II), (C)-(III), (D)-(IV)

(2) (A)-(IV), (B)-(III), (C)-(II), (D)-(I)

(3) (A)-(I), (B)-(III), (C)-(IV), (D)-(II)

(4) (A)-(IV), (B)-(III), (C)-(I), (D)-(II)

Options :

54025056505. 1

54025056506. 2

54025056507. 3

54025056508. 4

Question Number : 78 Question Id : 54025014128 Question Type : MCQ Option Shuffling : No Is Question Mandatory : No Calculator : None Response Time : N.A Think Time : N.A Minimum Instruction Time : 0

Correct Marks : 5 Wrong Marks : 1

Question Key Details :

Key	Value
Comprehension	MCQ

Bamboo dance is an important folk dance of which state ?

(1) Assam

(2) Bengal

(3) Nagaland

(4) Tripura

Options :

54025056509. 1

54025056510. 2

54025056511. 3

54025056512. 4

Question Number : 78 Question Id : 54025014128 Question Type : MCQ Option Shuffling : No Is Question Mandatory : No Calculator : None Response Time : N.A Think Time : N.A Minimum Instruction Time : 0

Correct Marks : 5 Wrong Marks : 1

Question Key Details :

Key	Value
Comprehension	MCQ

बाँस नृत्य किस राज्य का महत्त्वपूर्ण लोक नृत्य है ?

(1) असम

(2) बंगाल

(3) नागालैण्ड

(4) त्रिपुरा

Options :

54025056509. 1

54025056510. 2

54025056511. 3

54025056512. 4

Question Number : 79 Question Id : 54025014129 Question Type : MCQ Option Shuffling : No Is Question Mandatory : No Calculator : None Response Time : N.A Think Time : N.A Minimum Instruction Time : 0

Correct Marks : 5 Wrong Marks : 1

Question Key Details :

Key	Value
Comprehension	MCQ

First Female IAS officer of India was _____.

- (1) Tina Dabi
- (2) Kiran Bedi
- (3) Kamaljeet Sandhu
- (4) Anna George

Options :

54025056513. 1
54025056514. 2
54025056515. 3
54025056516. 4

Question Number : 79 Question Id : 54025014129 Question Type : MCQ Option Shuffling : No Is Question Mandatory : No Calculator : None Response Time : N.A Think Time : N.A Minimum Instruction Time : 0

Correct Marks : 5 Wrong Marks : 1

Question Key Details :

Key	Value
Comprehension	MCQ

भारत की प्रथम महिला प्रशासनिक अधिकारी कौन थी ?

- (1) टीना डाबी
- (2) किरण बेदी
- (3) कमलजीत संधू
- (4) अन्ना जॉर्ज

Options :

54025056513. 1
54025056514. 2
54025056515. 3
54025056516. 4

Question Number : 80 Question Id : 54025014130 Question Type : MCQ Option Shuffling : No Is Question Mandatory : No Calculator : None Response Time : N.A Think Time : N.A Minimum Instruction Time : 0

Correct Marks : 5 Wrong Marks : 1

Question Key Details :

Key	Value
Comprehension	MCQ

The basis for modern Periodic Table is _____.

- (1) Atomic Mass
- (2) Physical Property
- (3) Atomic Weight
- (4) Atomic Number

Options :

54025056517. 1
54025056518. 2
54025056519. 3
54025056520. 4

Question Number : 80 Question Id : 54025014130 Question Type : MCQ Option Shuffling : No Is Question Mandatory : No Calculator : None Response Time : N.A Think Time : N.A Minimum Instruction Time : 0

Correct Marks : 5 Wrong Marks : 1

Question Key Details :

Key	Value
Comprehension	MCQ

आधुनिक आवर्त सारणी _____ पर आधारित है

- (1) परमाण्वीय संहति
- (2) भौतिक गुण
- (3) परमाणु भार
- (4) परमाणु क्रमांक

Options :

54025056517. 1
54025056518. 2
54025056519. 3
54025056520. 4

Question Number : 81 Question Id : 54025014131 Question Type : MCQ Option Shuffling : No Is Question Mandatory : No Calculator : None
Response Time : N.A Think Time : N.A Minimum Instruction Time : 0

Correct Marks : 5 Wrong Marks : 1

Question Key Details :

Key	Value
Comprehension	MCQ

The boiling point of water _____.

- (1) is always 100°C
- (2) depends on atmospheric pressure
- (3) depends on the material of the container
- (4) depends on relative humidity

Options :

54025056521. 1
54025056522. 2
54025056523. 3
54025056524. 4

Question Number : 81 Question Id : 54025014131 Question Type : MCQ Option Shuffling : No Is Question Mandatory : No Calculator : None
Response Time : N.A Think Time : N.A Minimum Instruction Time : 0

Correct Marks : 5 Wrong Marks : 1

Question Key Details :

Key	Value
Comprehension	MCQ

पानी का क्वथनांक होता है

- (1) सदैव 100° सेल्सियस
- (2) वायुमण्डलीय दाब पर निर्भर करता है
- (3) पात्र में उपस्थित द्रव्य की मात्रा पर निर्भर करता है
- (4) सापेक्ष आर्द्रता पर निर्भर करता है

Options :

54025056521. 1
54025056522. 2
54025056523. 3
54025056524. 4

Question Number : 82 Question Id : 54025014132 Question Type : MCQ Option Shuffling : No Is Question Mandatory : No Calculator : None
Response Time : N.A Think Time : N.A Minimum Instruction Time : 0

Correct Marks : 5 Wrong Marks : 1

Question Key Details :

Key	Value
Comprehension	MCQ

The value of Avogadro's Number is _____.

- (1) 1.6×10^{-19}
- (2) 6.023×10^{20}
- (3) 1.6×10^{23}
- (4) 6.023×10^{23}

Options :

54025056525. 1
54025056526. 2
54025056527. 3
54025056528. 4

Question Number : 82 Question Id : 54025014132 Question Type : MCQ Option Shuffling : No Is Question Mandatory : No Calculator : None
Response Time : N.A Think Time : N.A Minimum Instruction Time : 0

Correct Marks : 5 Wrong Marks : 1

Question Key Details :

Key	Value
Comprehension	MCQ

आवोगाद्रो संख्या का मान _____ है।

- (1) 1.6×10^{-19}
- (2) 6.023×10^{20}
- (3) 1.6×10^{23}
- (4) 6.023×10^{23}

Options :

54025056525. 1
54025056526. 2
54025056527. 3
54025056528. 4

Question Number : 83 Question Id : 54025014133 Question Type : MCQ Option Shuffling : No Is Question Mandatory : No Calculator : None
Response Time : N.A Think Time : N.A Minimum Instruction Time : 0

Correct Marks : 5 Wrong Marks : 1

Question Key Details :

Key	Value
Comprehension	MCQ

An electric bulb has a filament made of _____.

- (1) Iron
- (2) Lead
- (3) Copper
- (4) Tungsten

Options :

54025056529. 1
54025056530. 2
54025056531. 3
54025056532. 4

Question Number : 83 Question Id : 54025014133 Question Type : MCQ Option Shuffling : No Is Question Mandatory : No Calculator : None
Response Time : N.A Think Time : N.A Minimum Instruction Time : 0

Correct Marks : 5 Wrong Marks : 1

Question Key Details :

Key	Value
Comprehension	MCQ

एक विद्युत बल्ब का तंतु किसका बना होता है

- (1) लोह
- (2) सीसा
- (3) ताँबा
- (4) टंग्स्टन

Options :

54025056529. 1
54025056530. 2
54025056531. 3
54025056532. 4

Question Number : 84 Question Id : 54025014134 Question Type : MCQ Option Shuffling : No Is Question Mandatory : No Calculator : None
Response Time : N.A Think Time : N.A Minimum Instruction Time : 0

Correct Marks : 5 Wrong Marks : 1

Question Key Details :

Key	Value
Comprehension	MCQ

Homi Jahangir Bhabha played an important role in the Discovery of _____.

- (1) Photoelectric effect
- (2) Quantum theory
- (3) Photosynthesis
- (4) Nucleus Discovery

Options :

54025056533. 1
54025056534. 2
54025056535. 3
54025056536. 4

Question Number : 84 Question Id : 54025014134 Question Type : MCQ Option Shuffling : No Is Question Mandatory : No Calculator : None
Response Time : N.A Think Time : N.A Minimum Instruction Time : 0

Correct Marks : 5 Wrong Marks : 1

Question Key Details :

Key	Value
Comprehension	MCQ

निम्नलिखित में से किस आविष्कार में होमी जहाँगीर भाभा की महत्वपूर्ण भूमिका है ?

- (1) प्रकाश विद्युत प्रभाव
- (2) क्वांटम का सिद्धांत
- (3) प्रकाश-संश्लेषण
- (4) बीजाइकाय की खोज

Options :

54025056533. 1
54025056534. 2
54025056535. 3
54025056536. 4

Question Number : 85 Question Id : 54025014135 Question Type : MCQ Option Shuffling : No Is Question Mandatory : No Calculator : None
Response Time : N.A Think Time : N.A Minimum Instruction Time : 0

Correct Marks : 5 Wrong Marks : 1

Question Key Details :

Key	Value
Comprehension	MCQ

Pluto was the famous author of Book _____.

- (1) Republic
- (2) The Prince
- (3) Great Tragedy
- (4) Mother India

Options :

54025056537. 1
54025056538. 2
54025056539. 3
54025056540. 4

Question Number : 85 Question Id : 54025014135 Question Type : MCQ Option Shuffling : No Is Question Mandatory : No Calculator : None
Response Time : N.A Think Time : N.A Minimum Instruction Time : 0

Correct Marks : 5 Wrong Marks : 1

Question Key Details :

Key	Value
Comprehension	MCQ

निम्नलिखित में से किस, प्रसिद्ध पुस्तक के लेखक फ्लूटो थे ?

- (1) रिपब्लिक
- (2) द प्रिंस
- (3) ग्रेट ट्रेजेडी
- (4) मदर इंडिया

Options :

54025056537. 1
54025056538. 2
54025056539. 3
54025056540. 4

Question Number : 86 Question Id : 54025014136 Question Type : MCQ Option Shuffling : No Is Question Mandatory : No Calculator : None Response Time : N.A Think Time : N.A Minimum Instruction Time : 0

Correct Marks : 5 Wrong Marks : 1

Question Key Details :

Key	Value
Comprehension	MCQ

Which of the city in the world is known as the Name of 'City of Gold' ?

- (1) Johannesburg
- (2) Rome
- (3) Delhi
- (4) Sydney

Options :

54025056541. 1
54025056542. 2
54025056543. 3
54025056544. 4

Question Number : 86 Question Id : 54025014136 Question Type : MCQ Option Shuffling : No Is Question Mandatory : No Calculator : None Response Time : N.A Think Time : N.A Minimum Instruction Time : 0

Correct Marks : 5 Wrong Marks : 1

Question Key Details :

Key	Value
Comprehension	MCQ

विश्व में किस शहर को स्वर्ण का शहर (City of Gold) नाम से जाना जाता है ?

- (1) जोहानिस बर्ग
- (2) रोम
- (3) दिल्ली
- (4) सिडनी

Options :

54025056541. 1
54025056542. 2
54025056543. 3
54025056544. 4

Question Number : 87 Question Id : 54025014137 Question Type : MCQ Option Shuffling : No Is Question Mandatory : No Calculator : None Response Time : N.A Think Time : N.A Minimum Instruction Time : 0

Correct Marks : 5 Wrong Marks : 1

Question Key Details :

Key	Value
Comprehension	MCQ

The UNO was formed on _____.

- (1) 21 August, 1944
- (2) 7 October, 1944
- (3) 24 October, 1945
- (4) 24 October, 1946

Options :

54025056545. 1
54025056546. 2
54025056547. 3
54025056548. 4

Question Number : 87 Question Id : 54025014137 Question Type : MCQ Option Shuffling : No Is Question Mandatory : No Calculator : None
Response Time : N.A Think Time : N.A Minimum Instruction Time : 0

Correct Marks : 5 Wrong Marks : 1

Question Key Details :

Key	Value
Comprehension	MCQ

संयुक्त राष्ट्र संघ की स्थापना _____ को हुई थी।

- (1) 21 अगस्त 1944
- (2) 7 अक्टूबर 1944
- (3) 24 अक्टूबर 1945
- (4) 24 अक्टूबर 1946

Options :

54025056545. 1
54025056546. 2
54025056547. 3
54025056548. 4

Question Number : 88 Question Id : 54025014138 Question Type : MCQ Option Shuffling : No Is Question Mandatory : No Calculator : None
Response Time : N.A Think Time : N.A Minimum Instruction Time : 0

Correct Marks : 5 Wrong Marks : 1

Question Key Details :

Key	Value
Comprehension	MCQ

Which country will host the Common Wealth Games 2026 ?

- (1) Newzealand
- (2) India
- (3) Australia
- (4) Pakistan

Options :

54025056549. 1
54025056550. 2
54025056551. 3
54025056552. 4

Question Number : 88 Question Id : 54025014138 Question Type : MCQ Option Shuffling : No Is Question Mandatory : No Calculator : None
Response Time : N.A Think Time : N.A Minimum Instruction Time : 0

Correct Marks : 5 Wrong Marks : 1

Question Key Details :

Key	Value
Comprehension	MCQ

वर्ष 2026 के राष्ट्रमण्डल खेलों की मेजबानी निम्न में से किस देश द्वारा की जाएगी ?

- (1) न्यूजीलैण्ड
- (2) भारत
- (3) ऑस्ट्रेलिया
- (4) पाकिस्तान

Options :

54025056549. 1
54025056550. 2
54025056551. 3
54025056552. 4

Question Number : 89 Question Id : 54025014139 Question Type : MCQ Option Shuffling : No Is Question Mandatory : No Calculator : None
Response Time : N.A Think Time : N.A Minimum Instruction Time : 0

Correct Marks : 5 Wrong Marks : 1

Question Key Details :

Key	Value
Comprehension	MCQ

Who won the Men's single title of Wimbledon 2022 ?

- (1) Novak Djokovic
- (2) C. Alcaraz Garbia
- (3) Rafael Nadal
- (4) C. Ruud

Options :

54025056553. 1
54025056554. 2
54025056555. 3
54025056556. 4

Question Number : 89 Question Id : 54025014139 Question Type : MCQ Option Shuffling : No Is Question Mandatory : No Calculator : None
Response Time : N.A Think Time : N.A Minimum Instruction Time : 0

Correct Marks : 5 Wrong Marks : 1

Question Key Details :

Key	Value
Comprehension	MCQ

विम्बलडन 2022 का पुरुष एकल खिताब निम्न में से किसने जीता ?

- (1) नोवाक डिजोक्विक
- (2) सी. अल्कराज गार्बिया
- (3) राबेल नडाल
- (4) सी. रूड

Options :

54025056553. 1
54025056554. 2
54025056555. 3
54025056556. 4

Question Number : 90 Question Id : 54025014140 Question Type : MCQ Option Shuffling : No Is Question Mandatory : No Calculator : None
Response Time : N.A Think Time : N.A Minimum Instruction Time : 0

Correct Marks : 5 Wrong Marks : 1

Question Key Details :

Key	Value
Comprehension	MCQ

The headquarters of SAARC is situated at _____.

- (1) India
- (2) Srilanka
- (3) Bhutan
- (4) Nepal

Options :

54025056557. 1
54025056558. 2
54025056559. 3
54025056560. 4

Question Number : 90 Question Id : 54025014140 Question Type : MCQ Option Shuffling : No Is Question Mandatory : No Calculator : None
Response Time : N.A Think Time : N.A Minimum Instruction Time : 0

Correct Marks : 5 Wrong Marks : 1

Question Key Details :

Key	Value
Comprehension	MCQ

सार्क का मुख्यालय _____ में स्थित है

- (1) भारत
- (2) श्री लंका
- (3) भूटान
- (4) नेपाल

Options :

54025056557. 1
54025056558. 2
54025056559. 3
54025056560. 4

Question Number : 91 Question Id : 54025014141 Question Type : MCQ Option Shuffling : No Is Question Mandatory : No Calculator : None
Response Time : N.A Think Time : N.A Minimum Instruction Time : 0

Correct Marks : 5 Wrong Marks : 1

Question Key Details :

Key	Value
Comprehension	MCQ

Find the next term of the given Alphanumeric series :

4 CV, 9 FU, 20 IT, 43 LS, _ ? _

- (1) 89 OR
- (2) 90 OR
- (3) 91 OR
- (4) 91 QR

Options :

54025056561. 1
54025056562. 2
54025056563. 3
54025056564. 4

Question Number : 91 Question Id : 54025014141 Question Type : MCQ Option Shuffling : No Is Question Mandatory : No Calculator : None
Response Time : N.A Think Time : N.A Minimum Instruction Time : 0

Correct Marks : 5 Wrong Marks : 1

Question Key Details :

Key	Value
Comprehension	MCQ

निम्न श्रंखला में अगला अक्षरांकीय पद क्या होगा :

4 CV, 9 FU, 20 IT, 43 LS, _?_

- (1) 89 OR
- (2) 90 OR
- (3) 91 OR
- (4) 91 QR

Options :

- 54025056561. 1
- 54025056562. 2
- 54025056563. 3
- 54025056564. 4

Question Number : 92 Question Id : 54025014142 Question Type : MCQ Option Shuffling : No Is Question Mandatory : No Calculator : None Response Time : N.A Think Time : N.A Minimum Instruction Time : 0

Correct Marks : 5 Wrong Marks : 1

Question Key Details :

Key	Value
Comprehension	MCQ

Rakesh goes 20 m North, then turns right and walk 25 m, then again turns right and walks 15 m, then again turns right and walks 25 m. How far is he from his original position ?

- (1) 10 m
- (2) 5 m
- (3) 15 m
- (4) 6 m

Options :

- 54025056565. 1
- 54025056566. 2
- 54025056567. 3
- 54025056568. 4

Question Number : 92 Question Id : 54025014142 Question Type : MCQ Option Shuffling : No Is Question Mandatory : No Calculator : None Response Time : N.A Think Time : N.A Minimum Instruction Time : 0

Correct Marks : 5 Wrong Marks : 1

Question Key Details :

Key	Value
Comprehension	MCQ

राकेश उत्तर की ओर 20 मीटर चलता है, फिर वह दाईं ओर मुड़कर 25 मीटर चलता है। वह दोबारा दाईं ओर मुड़कर 15 मीटर चलता है, फिर वह दोबारा दाईं ओर मुड़कर 25 मीटर चलता है। तब वह अपने मूल स्थान से कितनी दूरी पर है?

- (1) 10 मीटर
- (2) 5 मीटर
- (3) 15 मीटर
- (4) 6 मीटर

Options :

- 54025056565. 1
- 54025056566. 2
- 54025056567. 3
- 54025056568. 4

Question Number : 93 Question Id : 54025014143 Question Type : MCQ Option Shuffling : No Is Question Mandatory : No Calculator : None Response Time : N.A Think Time : N.A Minimum Instruction Time : 0

Correct Marks : 5 Wrong Marks : 1

Question Key Details :

Key	Value
Comprehension	MCQ

Study the following information to answer the given question :

A, B, C, D, E, F, G and H are eight family members sitting around a circle facing towards the centre.

- (i) H is on the immediate left of A but is not the neighbour of E or D.
- (ii) F is on the immediate right of B and G is the neighbour of E.
- (iii) C is between E and F.

What is the position of D ?

- (1) on the immediate left of B
- (2) between A and G
- (3) between B and F
- (4) between G and C

Options :

- 54025056569. 1
- 54025056570. 2
- 54025056571. 3
- 54025056572. 4

Question Number : 93 Question Id : 54025014143 Question Type : MCQ Option Shuffling : No Is Question Mandatory : No Calculator : None
Response Time : N.A Think Time : N.A Minimum Instruction Time : 0

Correct Marks : 5 Wrong Marks : 1

Question Key Details :

Key	Value
Comprehension	MCQ

Study the following information to answer the given question :

A, B, C, D, E, F, G और H एक परिवार के आठ सदस्य वृताकार रूप में केन्द्र की ओर मुँह करके बैठे हैं।

- (i) H, A के निकटतम बाईं ओर है, लेकिन E या D के पड़ोस में नहीं है।
- (ii) F, B के निकटतम दाईं ओर है और G, E का पड़ोसी है।
- (iii) C, E और F के मध्य है।

तब D की स्थिति क्या है ?

- (1) B के निकटतम बाईं ओर
- (2) A और G के मध्य में
- (3) B और F के मध्य में
- (4) G और C के मध्य में

Options :

- 54025056569. 1
- 54025056570. 2
- 54025056571. 3
- 54025056572. 4

Question Number : 94 Question Id : 54025014144 Question Type : MCQ Option Shuffling : No Is Question Mandatory : No Calculator : None
Response Time : N.A Think Time : N.A Minimum Instruction Time : 0

Correct Marks : 5 Wrong Marks : 1

Question Key Details :

Key	Value
Comprehension	MCQ

There are six Professors in a Physics department. They are P, Q, R, S, T and W. all are sitting around a hexagonal dinning table to have Lunch. Q is sitting between W and R, P is sitting between T and S and W is sitting to the left of S. Who is sitting between P and W ?

- (1) T
- (2) R
- (3) Q
- (4) S

Options :

- 54025056573. 1

54025056574. 2
54025056575. 3
54025056576. 4

Question Number : 94 Question Id : 54025014144 Question Type : MCQ Option Shuffling : No Is Question Mandatory : No Calculator : None
Response Time : N.A Think Time : N.A Minimum Instruction Time : 0

Correct Marks : 5 Wrong Marks : 1

Question Key Details :

Key	Value
Comprehension	MCQ

भौतिकी विभाग में 6 प्राध्यापक हैं, P, Q, R, S, T और W सभी दोपहर का भोजन करने के लिए षड्भुजाकरी, भोजन की मेज के चारो ओर बैठे है। W और R के मध्य Q बैठा है। S और T के मध्य P बैठा है। S के बाईं ओर W बैठा है। तब P और W के मध्य कौन बैठा है?

- (1) T
- (2) R
- (3) Q
- (4) S

Options :

54025056573. 1
54025056574. 2
54025056575. 3
54025056576. 4

Question Number : 95 Question Id : 54025014145 Question Type : MCQ Option Shuffling : No Is Question Mandatory : No Calculator : None
Response Time : N.A Think Time : N.A Minimum Instruction Time : 0

Correct Marks : 5 Wrong Marks : 1

Question Key Details :

Key	Value
Comprehension	MCQ

Read the Conclusions and then decide which of the given conclusion logically follows the given two statements, disregarding the known facts.

Statements :

- Some Books are Parks.
- Some Parks are Festival.
- No Festival is Bank.

Conclusions :

- (I) Some Books are Bank.
 - (II) Some Parks are not Bank.
- (1) only conclusion I follows
 - (2) only conclusion II follows
 - (3) both conclusion I and II follows
 - (4) none of the conclusion follows

Options :

54025056577. 1
54025056578. 2
54025056579. 3
54025056580. 4

Question Number : 95 Question Id : 54025014145 Question Type : MCQ Option Shuffling : No Is Question Mandatory : No Calculator : None
Response Time : N.A Think Time : N.A Minimum Instruction Time : 0

Correct Marks : 5 Wrong Marks : 1

Question Key Details :

Key	Value
Comprehension	MCQ

दिए गए निष्कर्षों को पढ़कर निश्चित कीजिए कि दिए गए निष्कर्षों में से कौन-सा निष्कर्ष तार्किक रूप से, दिए गए कथन का अनुसरण करता है, ज्ञात तथ्यों की अपेक्षा करते हुए।

कथन :

- कुछ किताबें पार्क हैं।
- कुछ पार्क, त्यौहार हैं।
- कोई भी त्यौहार बैंक नहीं है।

निष्कर्ष :

- (I) कुछ किताबें, बैंक है।
- (II) कुछ पार्क बैंक नहीं है।
- (1) केवल निष्कर्ष I अनुसरण करता है
- (2) केवल निष्कर्ष II अनुसरण करता है
- (3) दोनों निष्कर्ष I और II अनुसरण करते हैं
- (4) कोई भी निष्कर्ष अनुसरण नहीं करता है

Options :

- 54025056577. 1
- 54025056578. 2
- 54025056579. 3
- 54025056580. 4

Question Number : 96 Question Id : 54025014146 Question Type : MCQ Option Shuffling : No Is Question Mandatory : No Calculator : None Response Time : N.A Think Time : N.A Minimum Instruction Time : 0

Correct Marks : 5 Wrong Marks : 1

Question Key Details :

Key	Value
Comprehension	MCQ

On which day of the week was birthday of Arjun if week is starting from Monday ?

- (I) Arjun celebrated his birthday the very next day on which Sahil celebrated his birthday.
- (II) The sister of Arjun was born on the fifth day of the week and two days after Arjun was born.
- (1) if the data in statement I alone are sufficient to answer the question
- (2) if the data in statement II alone are sufficient to answer the question
- (3) if the data either in statement I alone or in statement II alone are sufficient to answer the question
- (4) if the data in both statement I and II together are necessary to answer the question

Options :

- 54025056581. 1
- 54025056582. 2
- 54025056583. 3
- 54025056584. 4

Question Number : 96 Question Id : 54025014146 Question Type : MCQ Option Shuffling : No Is Question Mandatory : No Calculator : None Response Time : N.A Think Time : N.A Minimum Instruction Time : 0

Correct Marks : 5 Wrong Marks : 1

Question Key Details :

Key	Value
Comprehension	MCQ

सप्ताह में किस दिन अर्जुन का जन्मदिन आता है यदि वह सप्ताह सोमवार से शुरू होता है ?

- (I) साहिल जिस दिन अपना जन्मदिन मनाता है, उसके ठीक अगले दिन, अर्जुन अपना जन्मदिन मनाता है।
(II) सप्ताह के पांचवें दिन, अर्जुन की बहन का जन्म हुआ था, और इसके दो दिन बाद अर्जुन का जन्म हुआ था।
- (1) प्रश्न का उत्तर देने के लिए, मात्र तथ्य I में दिया आंकड़ा पर्याप्त है।
(2) प्रश्न का उत्तर देने के लिए, मात्र तथ्य II में दिया आंकड़ा पर्याप्त है
(3) प्रश्न का उत्तर देने के लिए मात्र I में दिया आंकड़ा या मात्र II में दिया आंकड़ा पर्याप्त है
(4) प्रश्न का उत्तर देने के लिए दोनों तथ्य I और II एक-दूसरे के साथ जरूरी है

Options :

54025056581. 1
54025056582. 2
54025056583. 3
54025056584. 4

Question Number : 97 Question Id : 54025014147 Question Type : MCQ Option Shuffling : No Is Question Mandatory : No Calculator : None Response Time : N.A Think Time : N.A Minimum Instruction Time : 0

Correct Marks : 5 Wrong Marks : 1

Question Key Details :

Key	Value
Comprehension	MCQ

If RAMAYAN = 14, MAHABHARTH = 20, ASTAVAKRA = 18 then KURAN = ?

- (1) 10
(2) 12
(3) 14
(4) 16

Options :

54025056585. 1
54025056586. 2
54025056587. 3
54025056588. 4

Question Number : 97 Question Id : 54025014147 Question Type : MCQ Option Shuffling : No Is Question Mandatory : No Calculator : None Response Time : N.A Think Time : N.A Minimum Instruction Time : 0

Correct Marks : 5 Wrong Marks : 1

Question Key Details :

Key	Value
Comprehension	MCQ

यदि RAMAYAN = 14, MAHABHARTH = 20, ASTAVAKRA = 18 तब KURAN = ?

- (1) 10
(2) 12
(3) 14
(4) 16

Options :

54025056585. 1
54025056586. 2
54025056587. 3
54025056588. 4

Question Number : 98 Question Id : 54025014148 Question Type : MCQ Option Shuffling : No Is Question Mandatory : No Calculator : None Response Time : N.A Think Time : N.A Minimum Instruction Time : 0

Correct Marks : 5 Wrong Marks : 1

Question Key Details :

Key	Value
Comprehension	MCQ

A Clock was set correct at 10 O'clock. It loses 10 minutes per hour. What will be the angle between the hour and minute hands of the clock after one hour ?

- (1) 65°
- (2) 50°
- (3) 25°
- (4) 67°

Options :

- 54025056589. 1
- 54025056590. 2
- 54025056591. 3
- 54025056592. 4

Question Number : 98 Question Id : 54025014148 Question Type : MCQ Option Shuffling : No Is Question Mandatory : No Calculator : None Response Time : N.A Think Time : N.A Minimum Instruction Time : 0

Correct Marks : 5 Wrong Marks : 1

Question Key Details :

Key	Value
Comprehension	MCQ

एक घड़ी का समय ठीक 10 बजे सही किया गया। यह प्रत्येक घंटे में 10 मिनट कम समय दर्शाती है। एक घंटे के बाद घंटा और मिनट की सुईयों का कोण क्या होगा ?

- (1) 65°
- (2) 50°
- (3) 25°
- (4) 67°

Options :

- 54025056589. 1
- 54025056590. 2
- 54025056591. 3
- 54025056592. 4

Question Number : 99 Question Id : 54025014149 Question Type : MCQ Option Shuffling : No Is Question Mandatory : No Calculator : None Response Time : N.A Think Time : N.A Minimum Instruction Time : 0

Correct Marks : 5 Wrong Marks : 1

Question Key Details :

Key	Value
Comprehension	MCQ

What was the day on 10th January, 1951 ?

- (1) Tuesday
- (2) Wednesday
- (3) Thursday
- (4) Friday

Options :

- 54025056593. 1
- 54025056594. 2
- 54025056595. 3
- 54025056596. 4

Question Number : 99 Question Id : 54025014149 Question Type : MCQ Option Shuffling : No Is Question Mandatory : No Calculator : None Response Time : N.A Think Time : N.A Minimum Instruction Time : 0

Correct Marks : 5 Wrong Marks : 1

Question Key Details :

Key	Value
Comprehension	MCQ

10 जनवरी 1951 को कौन-सा दिन था ?

- (1) मंगलवार
- (2) बुधवार
- (3) वीरवार
- (4) शुक्रवार

Options :

54025056593. 1
54025056594. 2
54025056595. 3
54025056596. 4

Question Number : 100 Question Id : 54025014150 Question Type : MCQ Option Shuffling : No Is Question Mandatory : No Calculator : None
Response Time : N.A Think Time : N.A Minimum Instruction Time : 0

Correct Marks : 5 Wrong Marks : 1

Question Key Details :

Key	Value
Comprehension	MCQ

Arjun said to Rohan, "That boy playing hockey is the younger of the two brothers of the daughter of my father's wife." How is the boy playing hockey related to Arjun ?

- (1) Son
- (2) Brother
- (3) Nephew
- (4) Brother-in-law

Options :

54025056597. 1
54025056598. 2
54025056599. 3
54025056600. 4

Question Number : 100 Question Id : 54025014150 Question Type : MCQ Option Shuffling : No Is Question Mandatory : No Calculator : None
Response Time : N.A Think Time : N.A Minimum Instruction Time : 0

Correct Marks : 5 Wrong Marks : 1

Question Key Details :

Key	Value
Comprehension	MCQ

अर्जुन ने रोहन से कहा कि, हॉकी खेल रहा लड़का, मेरे पिताजी की पत्नी की बेटी के दो भाईयों में से छोटा भाई है। अर्जुन का हॉकी खेल रहे लड़के के साथ क्या संबंध है ?

- (1) बेटा
- (2) भाई
- (3) भतीजा
- (4) साला / जीजा

Options :

54025056597. 1
54025056598. 2
54025056599. 3
54025056600. 4

Question Number : 101 Question Id : 54025014151 Question Type : MCQ Option Shuffling : No Is Question Mandatory : No Calculator : None
Response Time : N.A Think Time : N.A Minimum Instruction Time : 0

Correct Marks : 5 Wrong Marks : 1

Question Key Details :

Key	Value
Comprehension	MCQ

Some sentences are coded in a an artificial language. Find the correct sentence for the given code :

“qust ovlb” means Spritual journey

“tuxn qust” means Spritual people

“pusb ovlb” means Beautiful journey

What does “Healthy People” mean ?

- (1) qust zomr
- (2) pusb zomr
- (3) tuxn zomr
- (4) ovlb zomr

Options :

54025056601. 1

54025056602. 2

54025056603. 3

54025056604. 4

Question Number : 101 Question Id : 54025014151 Question Type : MCQ Option Shuffling : No Is Question Mandatory : No Calculator : None Response Time : N.A Think Time : N.A Minimum Instruction Time : 0

Correct Marks : 5 Wrong Marks : 1

Question Key Details :

Key	Value
Comprehension	MCQ

कृत्रिम भाषा में कुछ वाक्यों को संकेत पद्धति में लिखा गया है। तब, दी गई संकेत-पद्धति में सही वाक्य ज्ञात कीजिए :

“qust ovlb” का अर्थ है Spritual journey

“tuxn qust” का अर्थ है Spritual people

“pusb ovlb” का अर्थ है Beautiful journey

तब, “Healthy People” का अर्थ है :

- (1) qust zomr
- (2) pusb zomr
- (3) tuxn zomr
- (4) ovlb zomr

Options :

54025056601. 1

54025056602. 2

54025056603. 3

54025056604. 4

Question Number : 102 Question Id : 54025014152 Question Type : MCQ Option Shuffling : No Is Question Mandatory : No Calculator : None Response Time : N.A Think Time : N.A Minimum Instruction Time : 0

Correct Marks : 5 Wrong Marks : 1

Question Key Details :

Key	Value
Comprehension	MCQ

Choose the missing terms out of given alternatives :

A3, E4, I10, O33, U136, ___ ? ___

- (1) A680
- (2) E681
- (3) I684
- (4) A685

Options :

54025056605. 1

54025056606. 2

54025056607. 3

54025056608. 4

Question Number : 102 Question Id : 54025014152 Question Type : MCQ Option Shuffling : No Is Question Mandatory : No Calculator : None
Response Time : N.A Think Time : N.A Minimum Instruction Time : 0

Correct Marks : 5 Wrong Marks : 1

Question Key Details :

Key	Value
Comprehension	MCQ

दिए गए विकल्पों में से लुप्त पद चुनिए :

A3, E4, I10, O33, U136, ___ ?

- (1) A680
- (2) E681
- (3) I684
- (4) A685

Options :

54025056605. 1

54025056606. 2

54025056607. 3

54025056608. 4

Question Number : 103 Question Id : 54025014153 Question Type : MCQ Option Shuffling : No Is Question Mandatory : No Calculator : None
Response Time : N.A Think Time : N.A Minimum Instruction Time : 0

Correct Marks : 5 Wrong Marks : 1

Question Key Details :

Key	Value
Comprehension	MCQ

Given below are two statements : one is labelled as **Assertion (A)** and the other is labelled as **Reason (R)**.

Assertion (A) : A person jumping out of the moving bus falls forward because his feet suddenly come to rest, while his body is in motion with the bus.

Reason (R) : This is based on Newton's Second law of motions, which states that a body continues to be in its state of rest or of uniform motion in a straight line unless compelled by an external force to change that state.

In the light of the above statements, choose the **most appropriate** answer from the options given below :

- (1) Both (A) and (R) are correct and (R) is the correct explanation of (A)
- (2) Both (A) and (R) are correct but (R) is **not** the correct explanation of (A)
- (3) (A) is correct but (R) is not correct
- (4) (A) is not correct but (R) is correct

Options :

54025056609. 1

54025056610. 2

54025056611. 3

54025056612. 4

Question Number : 103 Question Id : 54025014153 Question Type : MCQ Option Shuffling : No Is Question Mandatory : No Calculator : None
Response Time : N.A Think Time : N.A Minimum Instruction Time : 0

Correct Marks : 5 Wrong Marks : 1

Question Key Details :

Key	Value
Comprehension	MCQ

नीचे दो कथन दिए गए हैं: एक **अभिकथन (A)** के रूप में लिखित है तो दूसरा उसके **कारण (R)** के रूप में है।

अभिकथन (A) : एक चलती बस में एक व्यक्ति कूद कर आगे की ओर गिर जाता है। क्योंकि उसके पांव अचानक विश्राम करते हैं। जबकि उसका शरीर बस के साथ गति में होता है।

कारण (R) : यह न्यूटन के गति के दूसरे नियम पर आधारित है जिसमें कहा गया है कि कोई भी शरीर जब तक विश्राम में होता है या एक सीधी पंक्ति में समान गति में होता है, जब तक कि बाह्य बल से स्थिति में परिवर्तन के लिए बाध्य ना हो।

उपरोक्त कथन के आलोक में, नीचे दिए गए विकल्पों में से **सबसे उचित उत्तर** का चयन कीजिए:

- (1) दोनों (A) और (R) सत्य हैं और (R), (A) की सही व्याख्या है
- (2) दोनों (A) और (R) सत्य हैं लेकिन (R), (A) की सही व्याख्या नहीं है
- (3) (A) सत्य है, लेकिन (R) असत्य है
- (4) (A) असत्य है, लेकिन (R) सत्य है

Options :

54025056609. 1
54025056610. 2
54025056611. 3
54025056612. 4

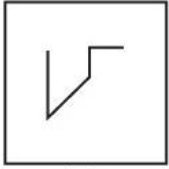
Question Number : 104 Question Id : 54025014154 Question Type : MCQ Option Shuffling : No Is Question Mandatory : No Calculator : None Response Time : N.A Think Time : N.A Minimum Instruction Time : 0

Correct Marks : 5 Wrong Marks : 1


Question Key Details :

Key	Value
Comprehension	MCQ

Find the alternative which contains figure (X) as its part :



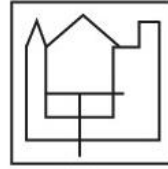
(X)



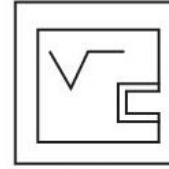
(A)



(B)



(C)



(D)

- (1) (A)
- (2) (B)
- (3) (C)
- (4) (D)

Options :

54025056613. 1
54025056614. 2
54025056615. 3
54025056616. 4

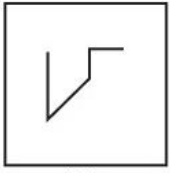
Question Number : 104 Question Id : 54025014154 Question Type : MCQ Option Shuffling : No Is Question Mandatory : No Calculator : None Response Time : N.A Think Time : N.A Minimum Instruction Time : 0

Correct Marks : 5 Wrong Marks : 1


Question Key Details :

Key	Value
Comprehension	MCQ

आकृति (X) में दिए गए भाग को, दिए विकल्पों में से ज्ञात कीजिए :



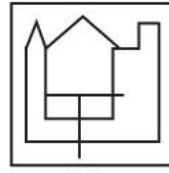
(X)



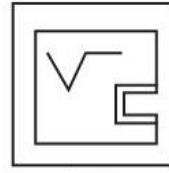
(A)



(B)



(C)



(D)

- (1) (A)
- (2) (B)
- (3) (C)
- (4) (D)

Options :

54025056613. 1
54025056614. 2
54025056615. 3
54025056616. 4

Question Number : 105 Question Id : 54025014155 Question Type : MCQ Option Shuffling : No Is Question Mandatory : No Calculator : None Response Time : N.A Think Time : N.A Minimum Instruction Time : 0

Correct Marks : 5 Wrong Marks : 1

Question Key Details :

Key	Value
Comprehension	MCQ

The door of Aman's house faces the East. From the back side of his house, he walk straight 100 meters, then turns to the left and walks 100 metre again. Finally, he turns towards left and stops after walking 50 meters. Now, Aman is in which direction from the starting point ?

- (1) North-East
- (2) North-West
- (3) South-East
- (4) South-West

Options :

54025056617. 1
54025056618. 2
54025056619. 3
54025056620. 4

Question Number : 105 Question Id : 54025014155 Question Type : MCQ Option Shuffling : No Is Question Mandatory : No Calculator : None Response Time : N.A Think Time : N.A Minimum Instruction Time : 0

Correct Marks : 5 Wrong Marks : 1

Question Key Details :

Key	Value
Comprehension	MCQ

अमन के घर का दरवाजा पूर्व दिशा की ओर है। घर के पीछे के हिस्से से वह सीधा 100 मीटर चलता है। फिर वह बाईं ओर मुड़कर दोबारा 100 मीटर चलता है। अंत में, वह बाईं ओर मुड़कर 50 मीटर चलकर रुक जाता है। अब, अमन अपने प्रारंभिक बिन्दु से किस दिशा में है ?

- (1) उत्तर-पूरब
- (2) उत्तर-पश्चिम
- (3) दक्षिण-पूरब
- (4) दक्षिण-पश्चिम

Options :

54025056617. 1
54025056618. 2
54025056619. 3
54025056620. 4

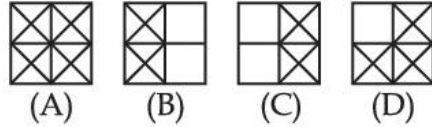

Question Number : 106 Question Id : 54025014156 Question Type : MCQ Option Shuffling : No Is Question Mandatory : No Calculator : None Response Time : N.A Think Time : N.A Minimum Instruction Time : 0

Correct Marks : 5 Wrong Marks : 1

Question Key Details :

Key	Value
Comprehension	MCQ

Find out which of the answer figures (1), (2), (3) and (4) complete the figure Matrix ?



- (1) (A)
- (2) (B)
- (3) (C)
- (4) (D)

Options :

- 54025056621. 1
- 54025056622. 2
- 54025056623. 3
- 54025056624. 4

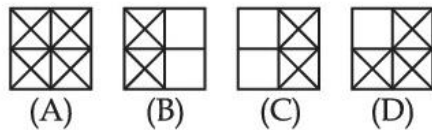
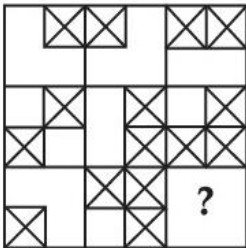
Question Number : 106 Question Id : 54025014156 Question Type : MCQ Option Shuffling : No Is Question Mandatory : No Calculator : None Response Time : N.A Think Time : N.A Minimum Instruction Time : 0

Correct Marks : 5 Wrong Marks : 1

Question Key Details :

Key	Value
Comprehension	MCQ

आकृति में दिए सांचे को पूरा करने के लिए आकृति (1), (2), (3) और (4) में से सही उत्तर खोजिए :



- (1) (A)
- (2) (B)
- (3) (C)
- (4) (D)

Options :

- 54025056621. 1
- 54025056622. 2
- 54025056623. 3
- 54025056624. 4

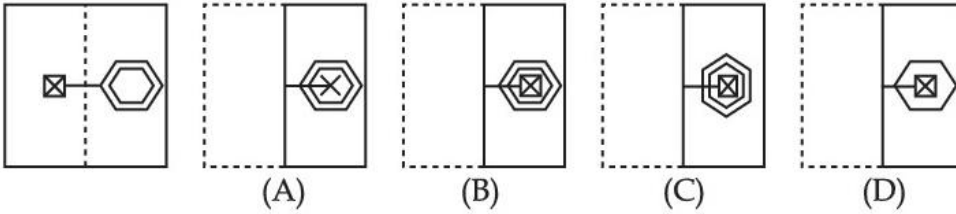
Question Number : 107 Question Id : 54025014157 Question Type : MCQ Option Shuffling : No Is Question Mandatory : No Calculator : None Response Time : N.A Think Time : N.A Minimum Instruction Time : 0

Correct Marks : 5 Wrong Marks : 1

Question Key Details :

Key	Value
Comprehension	MCQ

Find out which resembles the pattern formed when sheet is folded along the dotted line ?



- (1) (A)
- (2) (B)
- (3) (C)
- (4) (D)

Options :

- 54025056625. 1
- 54025056626. 2
- 54025056627. 3
- 54025056628. 4

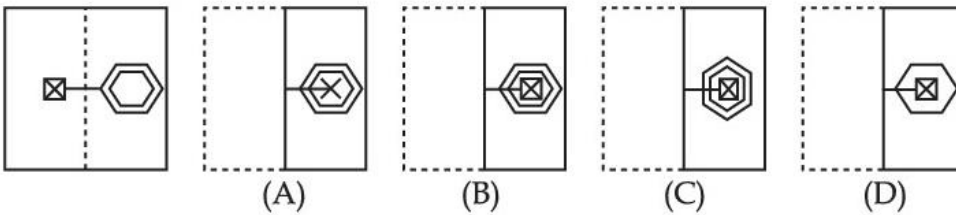
Question Number : 107 Question Id : 54025014157 Question Type : MCQ Option Shuffling : No Is Question Mandatory : No Calculator : None Response Time : N.A Think Time : N.A Minimum Instruction Time : 0

Correct Marks : 5 Wrong Marks : 1

Question Key Details :

Key	Value
Comprehension	MCQ

जब किसी बिन्दुरेखा से मोड़ा जाता हो तो निम्नलिखित में से कौन-सा प्रतिरूप (पैटर्न) निर्मित होता है ?



- (1) (A)
- (2) (B)
- (3) (C)
- (4) (D)

Options :

- 54025056625. 1
- 54025056626. 2
- 54025056627. 3
- 54025056628. 4

Question Number : 108 Question Id : 54025014158 Question Type : MCQ Option Shuffling : No Is Question Mandatory : No Calculator : None Response Time : N.A Think Time : N.A Minimum Instruction Time : 0

Correct Marks : 5 Wrong Marks : 1

Question Key Details :

Key	Value
Comprehension	MCQ

Read the following information carefully and answer the questions :

- (a) Six persons P, Q, R, S, T and U are sitting in two rows, three in each.
- (b) T is not at the end of any row
- (c) S is second to the left of U
- (d) R, the neighbour of T, is sitting diagonally opposite to S
- (e) Q is the neighbour of U

Which of the following group of people are in the same row ?

- (1) PTU
- (2) PTR
- (3) RSP
- (4) QTR

Options :

- 54025056629. 1
- 54025056630. 2
- 54025056631. 3
- 54025056632. 4

Question Number : 108 Question Id : 54025014158 Question Type : MCQ Option Shuffling : No Is Question Mandatory : No Calculator : None Response Time : N.A Think Time : N.A Minimum Instruction Time : 0

Correct Marks : 5 Wrong Marks : 1

Question Key Details :

Key	Value
Comprehension	MCQ

निम्नलिखित सूचना को ध्यानपूर्वक पढ़िए और दिए गए प्रश्नों के उत्तर दीजिए :

- (a) 6 व्यक्ति P, Q, R, S, T और U दो पंक्तियों में बैठे हैं, प्रत्येक पंक्ति में तीन व्यक्ति हैं।
- (b) T किसी भी पंक्ति के अंत में नहीं है
- (c) U के बाईं ओर दूसरे स्थान पर S बैठा है
- (d) T के पड़ोस में R बैठा है जोकि विकर्ण में S के सामने है
- (e) U के पड़ोस में Q बैठा है

निम्नलिखित विकल्प में से कौन सा समूह एक ही पंक्ति में बैठे है ?

- (1) PTU
- (2) PTR
- (3) RSP
- (4) QTR

Options :

- 54025056629. 1
- 54025056630. 2
- 54025056631. 3
- 54025056632. 4

Question Number : 109 Question Id : 54025014159 Question Type : MCQ Option Shuffling : No Is Question Mandatory : No Calculator : None Response Time : N.A Think Time : N.A Minimum Instruction Time : 0

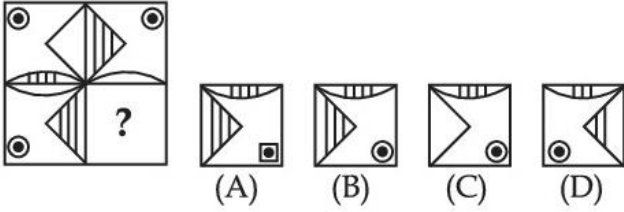
Correct Marks : 5 Wrong Marks : 1

Question Key Details :

Key	Value
Comprehension	MCQ

Which of the figure would complete the pattern ?

Problem figure



- (1) (A)
 (2) (B)
 (3) (C)
 (4) (D)

Options :

54025056633. 1
 54025056634. 2
 54025056635. 3
 54025056636. 4

Question Number : 109 Question Id : 54025014159 Question Type : MCQ Option Shuffling : No Is Question Mandatory : No Calculator : None Response Time : N.A Think Time : N.A Minimum Instruction Time : 0

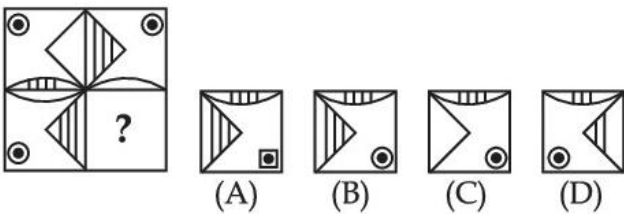
Correct Marks : 5 Wrong Marks : 1

Question Key Details :

Key	Value
Comprehension	MCQ

निम्न में से कौन-सी आकृति दिए गए प्रतिरूप को संपूर्ण करती है :?

प्रश्न आकृति



- (1) (A)
 (2) (B)
 (3) (C)
 (4) (D)

Options :

54025056633. 1
 54025056634. 2
 54025056635. 3
 54025056636. 4

Question Number : 110 Question Id : 54025014160 Question Type : MCQ Option Shuffling : No Is Question Mandatory : No Calculator : None Response Time : N.A Think Time : N.A Minimum Instruction Time : 0

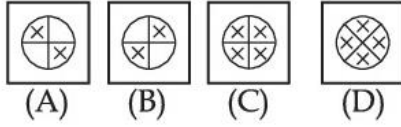
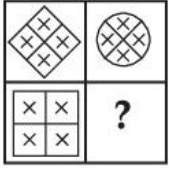
Correct Marks : 5 Wrong Marks : 1

Question Key Details :

Key	Value
Comprehension	MCQ

Which of the figure would complete the pattern ?

Problem figure



- (1) (A)
- (2) (B)
- (3) (C)
- (4) (D)

Options :

- 54025056637. 1
- 54025056638. 2
- 54025056639. 3
- 54025056640. 4

Question Number : 110 Question Id : 54025014160 Question Type : MCQ Option Shuffling : No Is Question Mandatory : No Calculator : None Response Time : N.A Think Time : N.A Minimum Instruction Time : 0

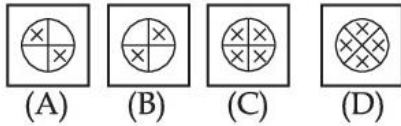
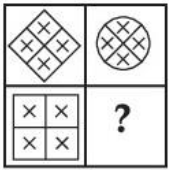
Correct Marks : 5 Wrong Marks : 1

Question Key Details :

Key	Value
Comprehension	MCQ

निम्न में से कौन-सी आकृति, दिए गए आकृति को संपूर्ण करेगी ?

प्रश्न आकृति



- (1) (A)
- (2) (B)
- (3) (C)
- (4) (D)

Options :

- 54025056637. 1
- 54025056638. 2
- 54025056639. 3
- 54025056640. 4